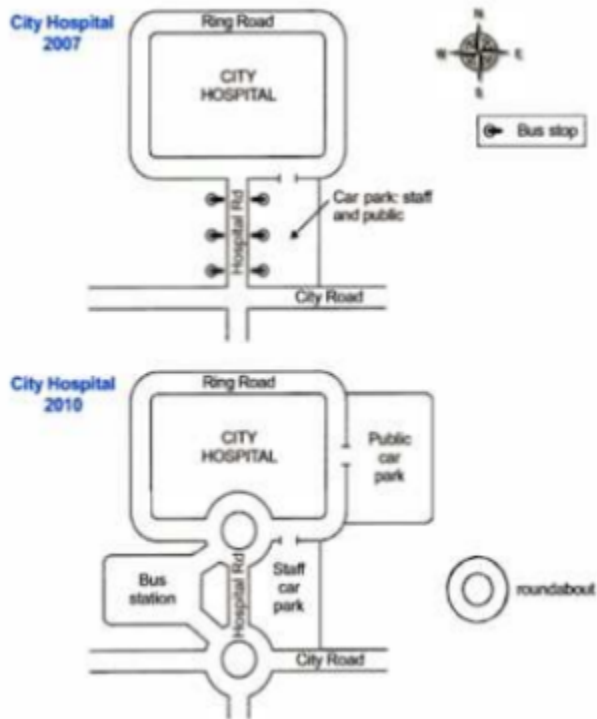
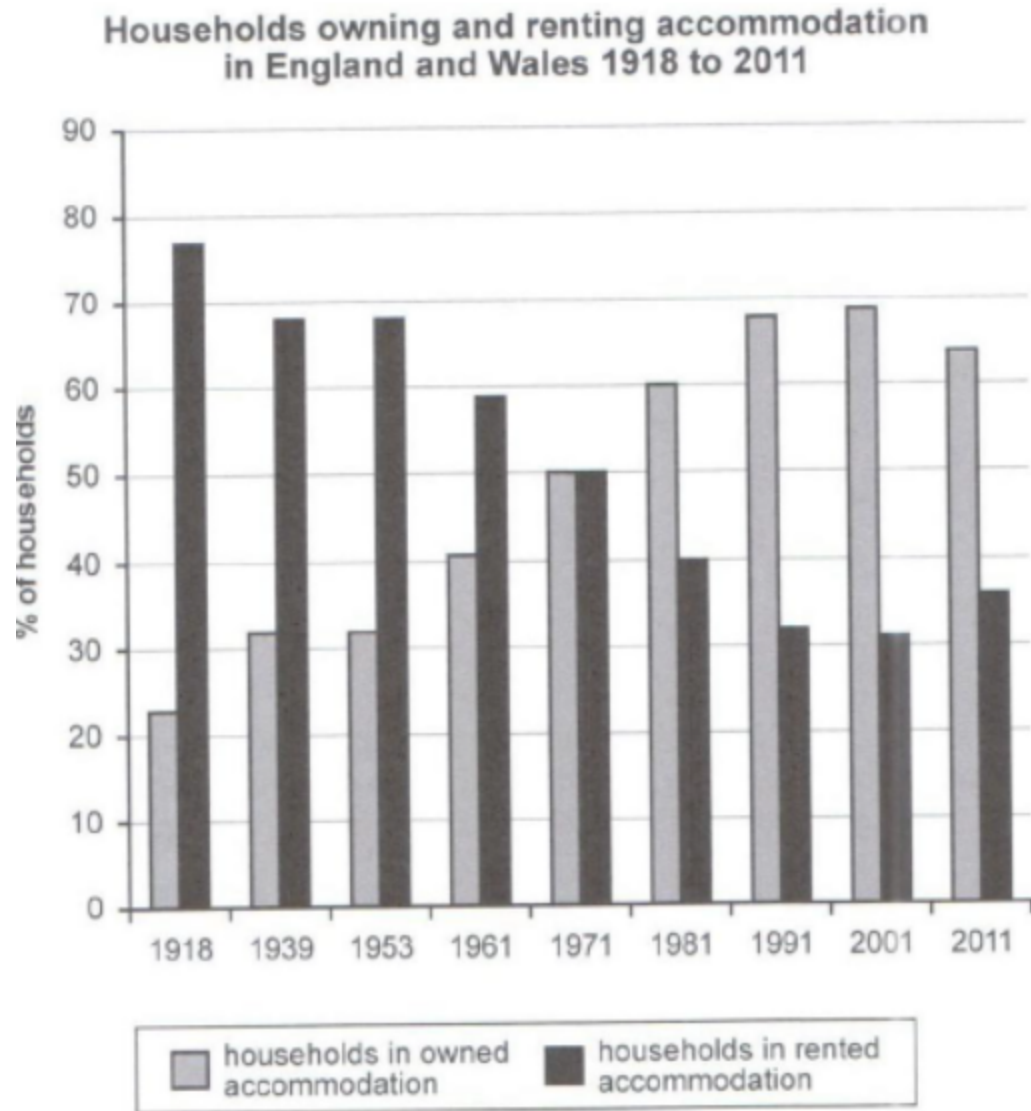


IELTS Academic Writing Task Sample Paper 34

Q1. The two maps below show road access to a city hospital in 2007 and 2010. Summarize the information by selecting and reporting the main features and make comparisons wherever relevant. write at least 150 words.

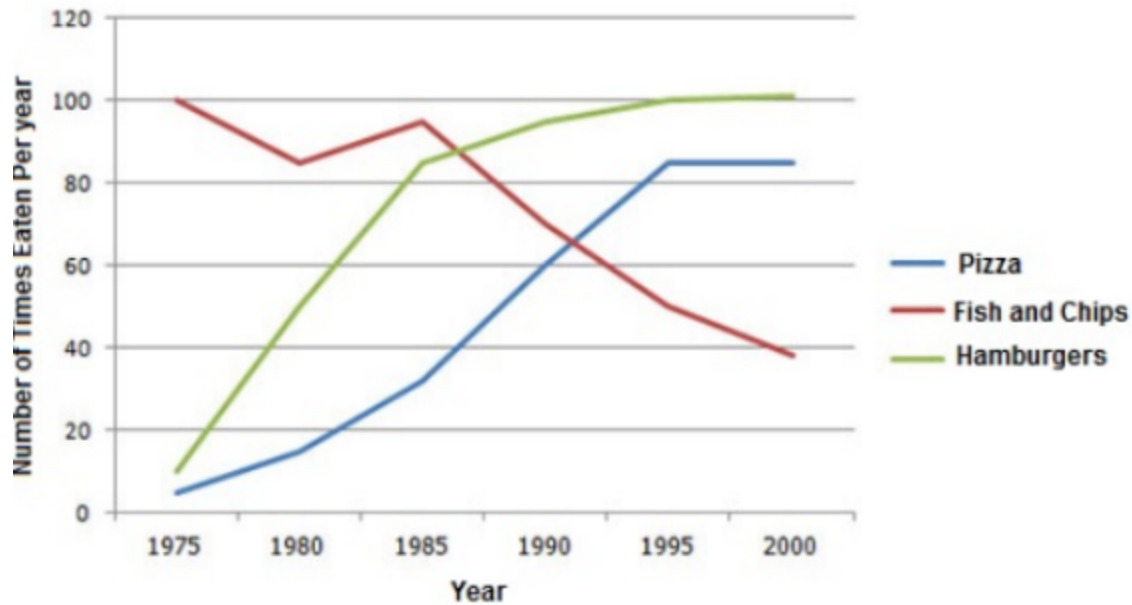


Q2. The chart below shows the percentage of households in owned and rented accommodation in England and Wales between 1918 and 2011. Summarize the information by selecting and reporting the main features and make comparisons where relevant. Write at least 150 words.



Q3. The line graph below shows changes in the amount and type of fast food consumed by Australian teenagers from 1975 to 2000. Summarize the information by selecting and reporting the main features and make comparisons where relevant. Write at least 150 words.


Consumption of Fast Food by Australian Teenagers



Q4. The table below shows the numbers of visitors to Ashdown Museum during the year before and the year after it was refurbished. The charts show the result of surveys asking visitors how satisfied they were with their visit, during the same two periods. Summarise the information by selecting and reporting the main features, and make comparisons where relevant. Write at least 150 words.

Total number of visitors to Ashdown Museum	
During the year before refurbishment:	74,000
During the year after refurbishment:	92,000

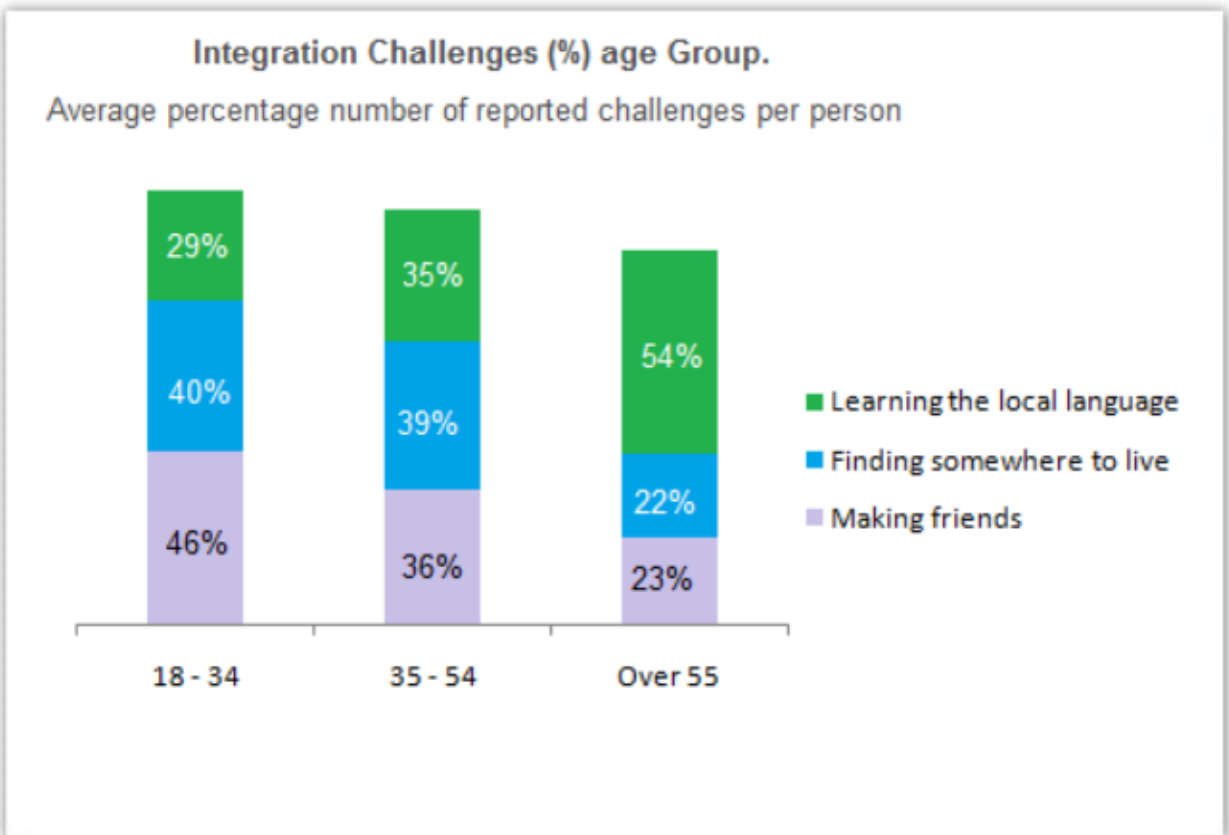
Results of surveys of visitor satisfaction



Q5. The chart below shows information about the challenges people face when they go to live in other countries.

Summarise the information by selecting and reporting the main features, and make comparisons where relevant.

Write at least 150 words.



Writing Task 2

Q6. Some countries have legal ages at which people can drink. Other countries believe not having strict laws is a better policy. Discuss both sides and give your own opinion

Q7. Car ownership has increased so rapidly over the past thirty years that there are constant traffic jams in many cities around the world. How true do you think this statement is? What measures can governments take to discourage people from owning cars

Q8. Some people believe that climate affects a person's way of life, while others believe that climate has a greater impact on the economy of a region. Discuss both views and give your opinion.

Q9. Many people think that there is a general increase in anti-social behaviour and disrespect for others. What do you think? What are the reasons for this, and how to fix the situation?

Q10. Some People believe that childhood is the best stage of happiness. While others believe that a person can enjoy more happiness in other stages of life. Discuss both views and give your opinion.