



Practice, Learn and Achieve  
Your Goal with Prepp

# ESIC Exam

Previous Paper

Simplifying  
Government Exams



SSC CHSL



IAS EXAM



RRB NTPC



NTSE



CDS



SSC CGL



CBSE UGC NET



IBPS PO



NDA



SBI PO



IBPS CLERK



AFCAT



SSC JE



CTET



CSIR UGC NET



CAPF



IBPS RRB

[www.prepp.in](http://www.prepp.in)

# Question Paper Preview

## Notations :

- Options shown in green color and with ✓ icon are correct.
- Options shown in red color and with ✗ icon are incorrect.

<b>Question Paper Name:</b>	Upper Division Clerks Shift 5
<b>Subject Name:</b>	UPPER DIVISION CLERK UDC
<b>Creation Date:</b>	2016-03-19 14:59:38
<b>Duration:</b>	120
<b>Total Marks:</b>	200
<b>Display Marks:</b>	Yes

## Upper Division Clerks Shift 1

Group Number :	1
Group Id :	73681528
Group Maximum Duration :	0
Group Minimum Duration :	120
Revisit allowed for view? :	No
Revisit allowed for edit? :	No
Break time:	0
Mandatory Break time:	No
Group Marks:	200

## Numerical Ability

Section Id :	736815107
Section Number :	1
Section type :	Online
Mandatory or Optional:	Mandatory
Number of Questions:	50
Number of Questions to be attempted:	50
Section Marks:	50
Display Number Panel:	Yes
Group All Questions:	No

Sub-Section Number:	1
Sub-Section Id:	736815161
Question Shuffling Allowed :	Yes

**Question Number : 1 Question Id : 7368155455 Question Type : MCQ Option Shuffling : Yes Display Question Number : Yes**  
**Single Line Question Option : No Option Orientation : Vertical**

**Correct : 1 Wrong : 0.25**

Convert 43 into a binary number.

## Options :

- ✗ 101101

2. ✘ 101100
3. ✘ 101010
4. ✔ 101011

Question Number : 1 Question Id : 7368155455 Question Type : MCQ Option Shuffling : Yes Display Question Number : Yes  
Single Line Question Option : No Option Orientation : Vertical

Correct : 1 Wrong : 0.25

43 को बाइनरी संख्या में परिवर्तित करें।

Options :

1. ✘ 101101
2. ✘ 101100
3. ✘ 101010
4. ✔ 101011

Question Number : 2 Question Id : 7368155456 Question Type : MCQ Option Shuffling : Yes Display Question Number : Yes  
Single Line Question Option : No Option Orientation : Vertical

Correct : 1 Wrong : 0.25

The number of prime factors in  $(15)^{25} \times (4)^{17} \times (6)^{16}$  is :

Options :

1. ✔ 116
2. ✘ 115
3. ✘ 114
4. ✘ 110

Question Number : 2 Question Id : 7368155456 Question Type : MCQ Option Shuffling : Yes Display Question Number : Yes  
Single Line Question Option : No Option Orientation : Vertical

Correct : 1 Wrong : 0.25

$(15)^{25} \times (4)^{17} \times (6)^{16}$  में अभाज्य गुणकों की संख्या है:

Options :

1. ✔ 116
2. ✘ 115
3. ✘ 114
4. ✘ 110

Question Number : 3 Question Id : 7368155457 Question Type : MCQ Option Shuffling : Yes Display Question Number : Yes  
Single Line Question Option : No Option Orientation : Vertical

Correct : 1 Wrong : 0.25

What least value must be assigned to \* so that the number  $35^*6824$  is divisible by 9?

Options :

1. ✘ 7
2. ✘ 9
3. ✔ 8

4. ✘ 5

Question Number : 3 Question Id : 7368155457 Question Type : MCQ Option Shuffling : Yes Display Question Number : Yes  
Single Line Question Option : No Option Orientation : Vertical

Correct : 1 Wrong : 0.25

कौन सा कम से कम मूल्य \* की जगह रखा जाना चाहिए ताकि संख्या  $35*6824,9$  से विभाज्य हो?

Options :

1. ✘ 7

2. ✘ 9

3. ✔ 8

4. ✘ 5

Question Number : 4 Question Id : 7368155458 Question Type : MCQ Option Shuffling : Yes Display Question Number : Yes  
Single Line Question Option : No Option Orientation : Vertical

Correct : 1 Wrong : 0.25

Compute:  $1203 \times 9999 + 1203$ .

Options :

1. ✘ 13029999

2. ✔ 12030000

3. ✘ 13020000

4. ✘ 12039999

Question Number : 4 Question Id : 7368155458 Question Type : MCQ Option Shuffling : Yes Display Question Number : Yes  
Single Line Question Option : No Option Orientation : Vertical

Correct : 1 Wrong : 0.25

गणना करें:  $1203 \times 9999 + 1203$

Options :

1. ✘ 13029999

2. ✔ 12030000

3. ✘ 13020000

4. ✘ 12039999

Question Number : 5 Question Id : 7368155459 Question Type : MCQ Option Shuffling : Yes Display Question Number : Yes  
Single Line Question Option : No Option Orientation : Vertical

Correct : 1 Wrong : 0.25

Find the units digit in  $(255)^{2013} + (241)^{2013}$

Options :

1. ✘ 4

2. ✔ 6

3. ✘ 5

4. ✘ 7

Question Number : 5 Question Id : 7368155459 Question Type : MCQ Option Shuffling : Yes Display Question Number : Yes  
Single Line Question Option : No Option Orientation : Vertical

Correct : 1 Wrong : 0.25

$(255)^{2013} + (241)^{2013}$  के इकाई अंक को ज्ञात करें?

Options :

1. ✘ 4
2. ✔ 6
3. ✘ 5
4. ✘ 7

Question Number : 6 Question Id : 7368155460 Question Type : MCQ Option Shuffling : Yes Display Question Number : Yes  
Single Line Question Option : No Option Orientation : Vertical

Correct : 1 Wrong : 0.25

Compute:  $312 \times 625 + 625$ .

Options :

1. ✘ 195652
2. ✘ 195256
3. ✔ 195625
4. ✘ 195650

Question Number : 6 Question Id : 7368155460 Question Type : MCQ Option Shuffling : Yes Display Question Number : Yes  
Single Line Question Option : No Option Orientation : Vertical

Correct : 1 Wrong : 0.25

गणना करें:  $312 \times 625 + 625$

Options :

1. ✘ 195652
2. ✘ 195256
3. ✔ 195625
4. ✘ 195650

Question Number : 7 Question Id : 7368155461 Question Type : MCQ Option Shuffling : Yes Display Question Number : Yes  
Single Line Question Option : No Option Orientation : Vertical

Correct : 1 Wrong : 0.25

रमन प्रतिदिन  $9\frac{1}{3}$  घंटे अध्ययन करता है। वह  $2\frac{3}{4}$  घंटे विज्ञान की पढाई करता है।  
अन्य विषयों की पढाई के लिए वह कितना समय देता है?

Options :

1. ✘  $2\frac{1}{5}$  घंटे
2. ✘  $2\frac{9}{11}$  घंटे
3. ✘  $2\frac{9}{10}$  घंटे
4. ✔  $6\frac{7}{12}$  घंटे

Question Number : 7 Question Id : 7368155461 Question Type : MCQ Option Shuffling : Yes Display Question Number : Yes  
Single Line Question Option : No Option Orientation : Vertical

Correct : 1 Wrong : 0.25

Raman studies for  $9\frac{1}{3}$  hours daily. He devotes  $2\frac{3}{4}$  hours of his time for Science. How much time does he devote for other subjects?

Options :

1. ✘  $2\frac{1}{5}$  hrs
2. ✘  $2\frac{9}{11}$  hrs
3. ✘  $2\frac{9}{10}$  hrs
4. ✔  $6\frac{7}{12}$  hrs

Question Number : 8 Question Id : 7368155462 Question Type : MCQ Option Shuffling : Yes Display Question Number : Yes  
Single Line Question Option : No Option Orientation : Vertical

Correct : 1 Wrong : 0.25

Rosy and Grace together bought a water bottle that contained 6 litres of water. Rosy consumed  $\frac{2}{5}$  of the water. Remaining water was consumed by Grace. Find the amount of water consumed by Rosy in liters?

Options :

1. ✔ 0.66 L
2. ✘ 1.5 L
3. ✘ 1.25 L
4. ✘ 0.5 L

Note: For this question, discrepancy is found in question/answer. Full Marks is being awarded to all candidates.

Question Number : 8 Question Id : 7368155462 Question Type : MCQ Option Shuffling : Yes Display Question Number : Yes  
Single Line Question Option : No Option Orientation : Vertical

Correct : 1 Wrong : 0.25

रोज़ी और ग्रेस दोनों ने एक साथ पानी की बोतल खरीदी जिसमें 6 लीटर पानी था। रोज़ी ने पानी का  $\frac{2}{5}$  हिस्सा पिया। शेष पानी ग्रेस ने पिया। रोज़ी ने कितने लीटर पानी पिया?

Options :

1. ✔ 0.66 लीटर
2. ✘ 1.5 लीटर
3. ✘ 1.25 लीटर
4. ✘ 0.5 लीटर

Note: For this question, discrepancy is found in question/answer. Full Marks is being awarded to all candidates.

Question Number : 9 Question Id : 7368155463 Question Type : MCQ Option Shuffling : Yes Display Question Number : Yes  
Single Line Question Option : No Option Orientation : Vertical

Correct : 1 Wrong : 0.25

Kalpana, Bindu, Chakri and Divya finished coloring a picture in  $\frac{2}{3}$  hour,  $\frac{1}{2}$  hour,  $\frac{2}{5}$  hour and  $\frac{3}{5}$  hour respectively. Who among the following finished their coloring first?

Options :

1. ✓ Chakri
2. ✗ Kalpana
3. ✗ Bindu
4. ✗ Divya

Question Number : 9 Question Id : 7368155463 Question Type : MCQ Option Shuffling : Yes Display Question Number : Yes Single Line Question Option : No Option Orientation : Vertical

Correct : 1 Wrong : 0.25

कल्पना, बिंदु, चक्री और दिव्या ने एक चित्र में रंग भरने के कार्य को क्रमशः  $\frac{2}{3}$  घंटे,  $\frac{1}{2}$  घंटे,  $\frac{2}{5}$  घंटे और  $\frac{3}{5}$  घंटे में पूरा किया। निम्नलिखित में से किसने सबसे पहले रंग भरने का कार्य समाप्त किया?

Options :

1. ✓ चक्री
2. ✗ कल्पना
3. ✗ बिंदु
4. ✗ दिव्या

Question Number : 10 Question Id : 7368155464 Question Type : MCQ Option Shuffling : Yes Display Question Number : Yes Single Line Question Option : No Option Orientation : Vertical

Correct : 1 Wrong : 0.25

Which among the following is the largest?

$$\frac{17}{4}, \frac{3}{2}, \frac{7}{3}, \frac{7}{2}$$

Options :

1. ✗  $\frac{7}{2}$
2. ✓  $\frac{17}{4}$
3. ✗  $\frac{7}{3}$
4. ✗  $\frac{3}{2}$

Question Number : 10 Question Id : 7368155464 Question Type : MCQ Option Shuffling : Yes Display Question Number : Yes Single Line Question Option : No Option Orientation : Vertical

Correct : 1 Wrong : 0.25

निम्नलिखित में से कौन सबसे बड़ा है?

$$\frac{17}{4}, \frac{3}{2}, \frac{7}{3}, \frac{7}{2}$$

Options :

1. ✘  $\frac{7}{2}$

2. ✔  $\frac{17}{4}$

3. ✘  $\frac{7}{3}$

4. ✘  $\frac{3}{2}$

Question Number : 11 Question Id : 7368155465 Question Type : MCQ Option Shuffling : Yes Display Question Number : Yes  
Single Line Question Option : No Option Orientation : Vertical

Correct : 1 Wrong : 0.25

The difference of two numbers is 10 and  $\frac{1}{5}$  of their sum is 12. Find the smallest number.

Options :

1. ✘ 35

2. ✘ 45

3. ✘ 28

4. ✔ 25

Question Number : 11 Question Id : 7368155465 Question Type : MCQ Option Shuffling : Yes Display Question Number : Yes  
Single Line Question Option : No Option Orientation : Vertical

Correct : 1 Wrong : 0.25

दो अंकों का अंतर 10 है, और उनके योग का  $\frac{1}{5}$  हिस्सा 12 है। तो सबसे छोटी संख्या का पता लगाएं।

Options :

1. ✘ 35

2. ✘ 45

3. ✘ 28

4. ✔ 25

Question Number : 12 Question Id : 7368155466 Question Type : MCQ Option Shuffling : Yes Display Question Number : Yes  
Single Line Question Option : No Option Orientation : Vertical

Correct : 1 Wrong : 0.25

The difference between a number and its  $\frac{1}{5}$  is 32. What is the number?

Options :

1. ✘ 30

2. ✘ 65

3. ✔ 40

4. ✘ 39



Question Number : 12 Question Id : 7368155466 Question Type : MCQ Option Shuffling : Yes Display Question Number : Yes  
Single Line Question Option : No Option Orientation : Vertical

Correct : 1 Wrong : 0.25

एक संख्या और उसकी  $1/5$  संख्या के बीच का अंतर 32 है। तो वो संख्या कौन सी है?

Options :

1. ✘ 30
2. ✘ 65
3. ✔ 40
4. ✘ 39

Question Number : 13 Question Id : 7368155467 Question Type : MCQ Option Shuffling : Yes Display Question Number : Yes  
Single Line Question Option : No Option Orientation : Vertical

Correct : 1 Wrong : 0.25

Find the value of  $(-2)^4 \times (2)^{-4} \times (2)^4$

Options :

1. ✔ 16
2. ✘ 27
3. ✘ -27
4. ✘ -108

Question Number : 13 Question Id : 7368155467 Question Type : MCQ Option Shuffling : Yes Display Question Number : Yes  
Single Line Question Option : No Option Orientation : Vertical

Correct : 1 Wrong : 0.25

$(-2)^4 \times (2)^{-4} \times (2)^4$  के मान का पता लगाएं?

Options :

1. ✔ 16
2. ✘ 27
3. ✘ -27
4. ✘ -108

Question Number : 14 Question Id : 7368155468 Question Type : MCQ Option Shuffling : Yes Display Question Number : Yes  
Single Line Question Option : No Option Orientation : Vertical

Correct : 1 Wrong : 0.25

If  $78X3-4Y67=3456$ , then which of the following should come in place of X?

Options :

1. ✘ 5
2. ✔ 2
3. ✘ 7
4. ✘ 3

Question Number : 14 Question Id : 7368155468 Question Type : MCQ Option Shuffling : Yes Display Question Number : Yes  
Single Line Question Option : No Option Orientation : Vertical

Correct : 1 Wrong : 0.25

अगर  $78X3-4Y67 = 3456$  है, तो X के स्थान पर निम्नलिखित में से कौन सी संख्या होनी चाहिए?

Options :

1. ✖ 5
2. ✔ 2
3. ✖ 7
4. ✖ 3

Question Number : 15 Question Id : 7368155469 Question Type : MCQ Option Shuffling : Yes Display Question Number : Yes Single Line Question Option : No Option Orientation : Vertical

Correct : 1 Wrong : 0.25

Solve :  $\frac{(811+692)^2 + (811-692)^2}{811 \times 811 + 692 \times 692}$

Options :

1. ✖ 565
2. ✖ 9
3. ✖ 105
4. ✔ 2

Question Number : 15 Question Id : 7368155469 Question Type : MCQ Option Shuffling : Yes Display Question Number : Yes Single Line Question Option : No Option Orientation : Vertical

Correct : 1 Wrong : 0.25

हल करें :  $\frac{(811+692)^2 + (811-692)^2}{811 \times 811 + 692 \times 692}$

Options :

1. ✖ 565
2. ✖ 9
3. ✖ 105
4. ✔ 2

Question Number : 16 Question Id : 7368155470 Question Type : MCQ Option Shuffling : Yes Display Question Number : Yes Single Line Question Option : No Option Orientation : Vertical

Correct : 1 Wrong : 0.25

The present salary of Karunakar is Rs.3500. This will be increased by 5% in the next year. What will be the increased salary of Karunakar?

Options :

1. ✖ Rs.3676
2. ✔ Rs.3675
3. ✖ Rs.3680
4. ✖ Rs.3690

Question Number : 16 Question Id : 7368155470 Question Type : MCQ Option Shuffling : Yes Display Question Number : Yes Single Line Question Option : No Option Orientation : Vertical

Correct : 1 Wrong : 0.25

करुणाकर का वर्तमान वेतन रु. 3500 है। अगले वर्ष इसमें 5% की वृद्धि की जाएगी। तो वेतनवृद्धि के बाद करुणाकर का वेतन कितना होगा?

Options :

1. ✘ रु. 3676
2. ✔ रु. 3675
3. ✘ रु. 3680
4. ✘ रु. 3690

Question Number : 17 Question Id : 7368155471 Question Type : MCQ Option Shuffling : Yes Display Question Number : Yes  
Single Line Question Option : No Option Orientation : Vertical

Correct : 1 Wrong : 0.25

In an examination, 94% of the candidates passed and 600 failed. How many candidates appeared for the examination?

Options :

1. ✘ 13500
2. ✔ 10000
3. ✘ 12000
4. ✘ 12500

Question Number : 17 Question Id : 7368155471 Question Type : MCQ Option Shuffling : Yes Display Question Number : Yes  
Single Line Question Option : No Option Orientation : Vertical

Correct : 1 Wrong : 0.25

एक परीक्षा में, 94% उम्मीदवार उत्तीर्ण हुए और 600 अनुत्तीर्ण हो गए। तो कुल कितने उम्मीदवार परीक्षा के लिए उपस्थित थे?

Options :

1. ✘ 13500
2. ✔ 10000
3. ✘ 12000
4. ✘ 12500

Question Number : 18 Question Id : 7368155472 Question Type : MCQ Option Shuffling : Yes Display Question Number : Yes  
Single Line Question Option : No Option Orientation : Vertical

Correct : 1 Wrong : 0.25

What percent of 3 days is 576 minutes?

Options :

1. ✘ 55%
2. ✘ 13.55%
3. ✔ 13.33%
4. ✘ 2.55%

Question Number : 18 Question Id : 7368155472 Question Type : MCQ Option Shuffling : Yes Display Question Number : Yes  
Single Line Question Option : No Option Orientation : Vertical

Correct : 1 Wrong : 0.25

3 दिन का कितना प्रतिशत 576 मिनट होता है?

Options :

1. ✘ 55%
2. ✘ 13.55%
3. ✔ 13.33%
4. ✘ 2.55%

Question Number : 19 Question Id : 7368155473 Question Type : MCQ Option Shuffling : Yes Display Question Number : Yes Single Line Question Option : No Option Orientation : Vertical

Correct : 1 Wrong : 0.25

Express 25paise: 2 rupees in its simplest form.

Options :

1. ✔ 1:8
2. ✘ 8:1
3. ✘ 4:5
4. ✘ 5:4

Question Number : 19 Question Id : 7368155473 Question Type : MCQ Option Shuffling : Yes Display Question Number : Yes Single Line Question Option : No Option Orientation : Vertical

Correct : 1 Wrong : 0.25

25 पैसे : 2 रुपये को उनके सरलतम रूप में दर्शाएँ।

Options :

1. ✔ 1:8
2. ✘ 8:1
3. ✘ 4:5
4. ✘ 5:4

Question Number : 20 Question Id : 7368155474 Question Type : MCQ Option Shuffling : Yes Display Question Number : Yes Single Line Question Option : No Option Orientation : Vertical

Correct : 1 Wrong : 0.25

Two numbers are in ratio 5:4. If 3 is subtracted from each, the ratio becomes 2:1. Find the largest number.

Options :

1. ✘ 6
2. ✔ 5
3. ✘ 2
4. ✘ 7

Question Number : 20 Question Id : 7368155474 Question Type : MCQ Option Shuffling : Yes Display Question Number : Yes Single Line Question Option : No Option Orientation : Vertical

Correct : 1 Wrong : 0.25

दो संख्या 5:4 के अनुपात में हैं। यदि प्रत्येक संख्या में से 3 घटाया जाता है, तो अनुपात 2:1 हो जाएगा। तो सबसे बड़ा संख्या क्या है?

Options :

1. ✘ 6
2. ✔ 5
3. ✘ 2
4. ✘ 7

Question Number : 21 Question Id : 7368155475 Question Type : MCQ Option Shuffling : Yes Display Question Number : Yes  
Single Line Question Option : No Option Orientation : Vertical

Correct : 1 Wrong : 0.25

A bag contains 50paise, 25paise and 10paise coins in the ratio 7:4:3 amounting to Rs.192/-. Find the number of 50paise coins.

Options :

1. ✘ 163
2. ✘ 175
3. ✔ 280
4. ✘ 200

Question Number : 21 Question Id : 7368155475 Question Type : MCQ Option Shuffling : Yes Display Question Number : Yes  
Single Line Question Option : No Option Orientation : Vertical

Correct : 1 Wrong : 0.25

एक बैग में 7:4:3 के अनुपात में 50 पैसे, 25 पैसे और 10 पैसे के सिक्के रखे हुए हैं जो कुल मिलाकर रु. 192 है। तो उनमें से 50 पैसे के सिक्कों की संख्या का पता लगाएं।

Options :

1. ✘ 163
2. ✘ 175
3. ✔ 280
4. ✘ 200

Question Number : 22 Question Id : 7368155476 Question Type : MCQ Option Shuffling : Yes Display Question Number : Yes  
Single Line Question Option : No Option Orientation : Vertical

Correct : 1 Wrong : 0.25

Find the average of 245,410,325,524,121.

Options :

1. ✘ 450
2. ✘ 225
3. ✘ 120
4. ✔ 325

Question Number : 22 Question Id : 7368155476 Question Type : MCQ Option Shuffling : Yes Display Question Number : Yes  
Single Line Question Option : No Option Orientation : Vertical

Correct : 1 Wrong : 0.25

245, 410, 325, 524, 121 की औसत निकालें।

Options :

Latest Sarkari Jobs, Govt Exam Results,  
Vacancies and updates on one click

Know More

1. ✘ 450
2. ✘ 225
3. ✘ 120
4. ✔ 325

Question Number : 23 Question Id : 7368155477 Question Type : MCQ Option Shuffling : Yes Display Question Number : Yes  
Single Line Question Option : No Option Orientation : Vertical

Correct : 1 Wrong : 0.25

The average of 9 quantities is 8. The average of 6 of them is 7. What is the average of remaining quantities?

Options :

1. ✔ 10
2. ✘ 15
3. ✘ 42
4. ✘ 30

Question Number : 23 Question Id : 7368155477 Question Type : MCQ Option Shuffling : Yes Display Question Number : Yes  
Single Line Question Option : No Option Orientation : Vertical

Correct : 1 Wrong : 0.25

9 चीजों की औसत मात्रा 8 है। उनमें से 6 की औसत 7 है। शेष मात्रा की औसत कितनी होगी?

Options :

1. ✔ 10
2. ✘ 15
3. ✘ 42
4. ✘ 30

Question Number : 24 Question Id : 7368155478 Question Type : MCQ Option Shuffling : Yes Display Question Number : Yes  
Single Line Question Option : No Option Orientation : Vertical

Correct : 1 Wrong : 0.25

The average monthly income of L and M is Rs.9000. The average monthly income of M and N is Rs.6200 and the average monthly income of L and N is Rs.7200. The monthly income of N is?

Options :

1. ✔ Rs.2750
2. ✘ Rs.3500
3. ✘ Rs.3125
4. ✘ Rs.4800

Note: For this question, discrepancy is found in question/answer. Full Marks is being awarded to all candidates.

Question Number : 24 Question Id : 7368155478 Question Type : MCQ Option Shuffling : Yes Display Question Number : Yes  
Single Line Question Option : No Option Orientation : Vertical

Correct : 1 Wrong : 0.25

L और M की औसत मासिक आय रु. 9000 है। M और N की औसत मासिक आय रु. 6200 है, L और N की औसत मासिक आय रु. 7200 है। N की मासिक आय कितनी होगी?

Options :

1. ✓ रु. 2750
2. ✗ रु. 3500
3. ✗ रु. 3125
4. ✗ रु. 4800

Note: For this question, discrepancy is found in question/answer. Full Marks is being awarded to all candidates.

Question Number : 25 Question Id : 7368155479 Question Type : MCQ Option Shuffling : Yes Display Question Number : Yes Single Line Question Option : No Option Orientation : Vertical

Correct : 1 Wrong : 0.25

Find the amount at simple interest on Rs.4200 for 3 years 3 months at 5% per annum.

Options :

1. ✗ Rs.3500.5
2. ✓ Rs.4882.5
3. ✗ Rs.3800
4. ✗ Rs.3900

Question Number : 25 Question Id : 7368155479 Question Type : MCQ Option Shuffling : Yes Display Question Number : Yes Single Line Question Option : No Option Orientation : Vertical

Correct : 1 Wrong : 0.25

3 वर्ष 3 महीनों के लिए प्रति वर्ष 5% की दर से रु. 4200 पर साधारण ब्याज की राशि निकालें।

Options :

1. ✗ रु. 3500.5
2. ✓ रु. 4882.5
3. ✗ रु. 3800
4. ✗ रु. 3900

Question Number : 26 Question Id : 7368155480 Question Type : MCQ Option Shuffling : Yes Display Question Number : Yes Single Line Question Option : No Option Orientation : Vertical

Correct : 1 Wrong : 0.25

Simple interest on a certain sum is  $\frac{49}{25}$  of the sum. Find the time, if both time and rate percent are numerically equal.

Options :

1. ✗  $1\frac{1}{2}$  years
2. ✓ 14 years
3. ✗ 20 years
4. ✗  $2\frac{1}{2}$  years

Question Number : 26 Question Id : 7368155480 Question Type : MCQ Option Shuffling : Yes Display Question Number : Yes  
Single Line Question Option : No Option Orientation : Vertical

Correct : 1 Wrong : 0.25

एक निश्चित राशि पर साधारण ब्याज की राशी  $\frac{49}{25}$  है। अगर दोनों समय और दर प्रतिशत संख्यानुसार बराबर हैं, तो समय का पता लगाएं।

Options :

1. ✘  $1\frac{1}{2}$  वर्ष
2. ✔ 14 वर्ष
3. ✘ 20 वर्ष
4. ✘  $2\frac{1}{2}$  वर्ष

Question Number : 27 Question Id : 7368155481 Question Type : MCQ Option Shuffling : Yes Display Question Number : Yes  
Single Line Question Option : No Option Orientation : Vertical

Correct : 1 Wrong : 0.25

Simple interest for a sum of Rs.4800 for 2 years is Rs.35 more than the simple interest for Rs.4300 for the same duration. Find the rate of interest.

Options :

1. ✘ 2.5%
2. ✘ 3.6%
3. ✔ 3.5%
4. ✘ 3%

Question Number : 27 Question Id : 7368155481 Question Type : MCQ Option Shuffling : Yes Display Question Number : Yes  
Single Line Question Option : No Option Orientation : Vertical

Correct : 1 Wrong : 0.25

2 वर्ष के लिए रु. 4800 की राशि का होनेवाला साधारण ब्याज समान अवधि के लिए रु. 4300 की राशि के साधारण ब्याज की तुलना में रु. 35 से अधिक है। तो ब्याज की दर का पता लगाएं।

Options :

1. ✘ 2.5%
2. ✘ 3.6%
3. ✔ 3.5%
4. ✘ 3%

Question Number : 28 Question Id : 7368155482 Question Type : MCQ Option Shuffling : Yes Display Question Number : Yes  
Single Line Question Option : No Option Orientation : Vertical

Correct : 1 Wrong : 0.25

A watch costing Rs.1400 has been sold for Rs.1960. The percentage of profit was?

Options :

1. ✘ 24%



2. ✘ 35%
3. ✘ 21%
4. ✔ 40%

Question Number : 28 Question Id : 7368155482 Question Type : MCQ Option Shuffling : Yes Display Question Number : Yes  
Single Line Question Option : No Option Orientation : Vertical

Correct : 1 Wrong : 0.25

यदि रु.1400 की कीमत के एक घड़ी को रु. 1960 में बेच दिया जाता है, तो इसमें लाभ का प्रतिशत कितना था?

Options :

1. ✘ 24%
2. ✘ 35%
3. ✘ 21%
4. ✔ 40%

Question Number : 29 Question Id : 7368155483 Question Type : MCQ Option Shuffling : Yes Display Question Number : Yes  
Single Line Question Option : No Option Orientation : Vertical

Correct : 1 Wrong : 0.25

Sulekha sells a Teddy bear for Rs.2400. She loses 60% in the bargain. What was the price at which she bought it?

Options :

1. ✔ Rs.6000
2. ✘ Rs.7000
3. ✘ Rs.9000
4. ✘ Rs.10500

Question Number : 29 Question Id : 7368155483 Question Type : MCQ Option Shuffling : Yes Display Question Number : Yes  
Single Line Question Option : No Option Orientation : Vertical

Correct : 1 Wrong : 0.25

सुलेखा रु. 2400 को एक टेडी बियर बेचती है। उसे सौदेबाजी में 60% का नुकसान होता है। तो उसने वह कितनी कीमत पर खरीदा था?

Options :

1. ✔ रु. 6000
2. ✘ रु. 7000
3. ✘ रु. 9000
4. ✘ रु. 10500

Question Number : 30 Question Id : 7368155484 Question Type : MCQ Option Shuffling : Yes Display Question Number : Yes  
Single Line Question Option : No Option Orientation : Vertical

Correct : 1 Wrong : 0.25

Lasya bought an article for Rs.4844. Due to some defects in it, she had to pay Rs.156 to the mechanic for its repair. Then, she sold it for Rs.4700. Find her loss percent.

Options :

1. ✘ 5.5%
2. ✔ 6%
3. ✘ 5%
4. ✘ 2.5%

Question Number : 30 Question Id : 7368155484 Question Type : MCQ Option Shuffling : Yes Display Question Number : Yes  
Single Line Question Option : No Option Orientation : Vertical

Correct : 1 Wrong : 0.25

लास्य ने रु. 4844 में एक वस्तु खरीदी है। इसमें कुछ दोष होने के कारण, इसकी मरम्मत के लिए उसने मैकेनिक को रु.156 का भुगतान किया। फिर, उस वस्तु को रु. 4700 में बेच दिया। इस व्यवहार में हुए नुकसान का प्रतिशत ज्ञात करें?

Options :

1. ✘ 5.5%
2. ✔ 6%
3. ✘ 5%
4. ✘ 2.5%

Question Number : 31 Question Id : 7368155485 Question Type : MCQ Option Shuffling : Yes Display Question Number : Yes  
Single Line Question Option : No Option Orientation : Vertical

Correct : 1 Wrong : 0.25

An item is sold at Rs.420 by allowing a discount of 16% on its marked price. The marked price of the item is?

Options :

1. ✘ Rs.700
2. ✘ Rs.590
3. ✔ Rs.500
4. ✘ Rs.650

Question Number : 31 Question Id : 7368155485 Question Type : MCQ Option Shuffling : Yes Display Question Number : Yes  
Single Line Question Option : No Option Orientation : Vertical

Correct : 1 Wrong : 0.25

एक वस्तु को उसके अंकित मूल्य पर 16% की छूट देकर रु. 420 में बेचा जाता है। तो उस वस्तु का अंकित मूल्य कितना होना चाहिए?

Options :

1. ✘ रु. 700
2. ✘ रु. 590
3. ✔ रु. 500
4. ✘ रु. 650

Question Number : 32 Question Id : 7368155486 Question Type : MCQ Option Shuffling : Yes Display Question Number : Yes  
Single Line Question Option : No Option Orientation : Vertical

Correct : 1 Wrong : 0.25

What is a single discount equivalent to a discount series of 12% and 14%?

Options :

1. ✘ 24.5%
2. ✘ 23.44%
3. ✔ 24.32%
4. ✘ 26%

Question Number : 32 Question Id : 7368155486 Question Type : MCQ Option Shuffling : Yes Display Question Number : Yes  
Single Line Question Option : No Option Orientation : Vertical

Correct : 1 Wrong : 0.25

12% और 14% की छूट श्रृंखला (discount series) के समतुल्य एक सिंगल छूट निम्नलिखित में से कौन सी होनी चाहिए?

Options :

1. ✘ 24.5%
2. ✘ 23.44%
3. ✔ 24.32%
4. ✘ 26%

Question Number : 33 Question Id : 7368155487 Question Type : MCQ Option Shuffling : Yes Display Question Number : Yes  
Single Line Question Option : No Option Orientation : Vertical

Correct : 1 Wrong : 0.25

The marked price of a bicycle is Rs.5750. A shopkeeper allows a discount of 15% and gets a profit of 15%. Find the cost price of the bicycle.

Options :

1. ✘ Rs.4850
2. ✔ Rs.4250
3. ✘ Rs.4900
4. ✘ Rs.4950

Question Number : 33 Question Id : 7368155487 Question Type : MCQ Option Shuffling : Yes Display Question Number : Yes  
Single Line Question Option : No Option Orientation : Vertical

Correct : 1 Wrong : 0.25

एक साइकिल का अंकित मूल्य रु. 5750 है। एक दुकानदार इसपर 15% की छूट देता है और उसे 15% का लाभ मिलता है। साइकिल का लागत मूल्य बताएं?

Options :

1. ✘ रु. 4850
2. ✔ रु. 4250
3. ✘ रु. 4900
4. ✘ रु. 4950

Question Number : 34 Question Id : 7368155488 Question Type : MCQ Option Shuffling : Yes Display Question Number : Yes  
Single Line Question Option : No Option Orientation : Vertical

Correct : 1 Wrong : 0.25

Study the following table carefully and answer the question that follows.

YEAR WISE VILLAGE ELECTRIFICATION

YEAR	NUMBER OF VILLAGES ELECTRIFIED
1990-91	110286
1991-92	6046
1992-93	3669
1993-94	3669
1994-95	3954
1995-96	4086
1996-97	3843

In which year, 3954 number of villages were electrified?

Options :

- ✓ 1994-95
- ✗ 1992-93
- ✗ 1995-96
- ✗ 1996-97

Question Number : 34 Question Id : 7368155488 Question Type : MCQ Option Shuffling : Yes Display Question Number : Yes Single Line Question Option : No Option Orientation : Vertical

Correct : 1 Wrong : 0.25

नीचे दी गई तालिका को ध्यान से पढ़ें और पूछे गए सवाल का जवाब दीजिए।

वर्षवार ग्रामीण विद्युतीकरण

वर्ष	विद्युतीकृत किये गए गांवों की संख्या
1990-91	110286
1991-92	6046
1992-93	3669
1993-94	3669
1994-95	3954
1995-96	4086
1996-97	3843

कौन से वर्ष में 3954 गांवों का विद्युतीकरण किया गया था?

Options :

- ✓ 1994-95
- ✗ 1992-93
- ✗ 1995-96
- ✗ 1996-97

Correct : 1 Wrong : 0.25

Study the following table carefully and answer the question that follows.

YEAR WISE VILLAGE ELECTRIFICATION

YEAR	NUMBER OF VILLAGES ELECTRIFIED
1990-91	110286
1991-92	6046
1992-93	3669
1993-94	3669
1994-95	3954
1995-96	4086
1996-97	3843

In which years, the number of villages electrified were numerically equal?

Options :

- ✓ 1992-93 and 1993-94
- ✗ 1992-93 and 1994-95
- ✗ 1993-94 and 1994-95
- ✗ 1993-94 and 1995-96

Correct : 1 Wrong : 0.25

नीचे दी गई तालिका को ध्यान से पढ़ें और पूछे गए सवाल का जवाब दीजिए।

वर्षवार ग्रामीण विद्युतीकरण

वर्ष	विद्युतीकृत किये गए गांवों की संख्या
1990-91	110286
1991-92	6046
1992-93	3669
1993-94	3669
1994-95	3954
1995-96	4086
1996-97	3843

कौन से वर्षों में, विद्युतीकृत गांवों की संख्या संख्यात्मक दृष्टि से बराबर थी?

Options :

- ✓ 1992-1993 और 1993-94
- ✗ 1992-1993 और 1994-95
- ✗ 1993-94 और 19

#### 4. ✖ 1993-94 और 1995-1996

Question Number : 36 Question Id : 7368155490 Question Type : MCQ Option Shuffling : Yes Display Question Number : Yes  
Single Line Question Option : No Option Orientation : Vertical

Correct : 1 Wrong : 0.25

Study the following table carefully and answer the question that follows.

#### YEAR WISE VILLAGE ELECTRIFICATION

YEAR	NUMBER OF VILLAGES ELECTRIFIED
1990-91	110286
1991-92	6046
1992-93	3669
1993-94	3669
1994-95	3954
1995-96	4086
1996-97	3843

In which year, more number of villages were electrified?

Options :

- ✖ 1992-93
- ✖ 1994-95
- ✖ 1995-96
- ✔ 1990-91

Question Number : 36 Question Id : 7368155490 Question Type : MCQ Option Shuffling : Yes Display Question Number : Yes  
Single Line Question Option : No Option Orientation : Vertical

Correct : 1 Wrong : 0.25

नीचे दी गई तालिका को ध्यान से पढ़ें और पूछे गए सवाल का जवाब दीजिए।

#### वर्षवार ग्रामीण विद्युतीकरण

वर्ष	विद्युतीकृत किये गए गांवों की संख्या
1990-91	110286
1991-92	6046
1992-93	3669
1993-94	3669
1994-95	3954
1995-96	4086
1996-97	3843

कौन से वर्ष में ज्यादा गांवों को विद्युतीकृत किया गया था?

Options :

- ✖ 1992-93

2. ✘ 1994-95
3. ✘ 1995-96
4. ✔ 1990-91

Question Number : 37 Question Id : 7368155491 Question Type : MCQ Option Shuffling : Yes Display Question Number : Yes  
Single Line Question Option : No Option Orientation : Vertical

Correct : 1 Wrong : 0.25

Study the following table carefully and answer the question that follows.

#### YEAR WISE VILLAGE ELECTRIFICATION

YEAR	NUMBER OF VILLAGES ELECTRIFIED
1990-91	110286
1991-92	6046
1992-93	3669
1993-94	3669
1994-95	3954
1995-96	4086
1996-97	3843

In which year, 4086 number of villages were electrified?

Options :

1. ✘ 1996-97
2. ✘ 1994-95
3. ✔ 1995-96
4. ✘ 1992-93

Question Number : 37 Question Id : 7368155491 Question Type : MCQ Option Shuffling : Yes Display Question Number : Yes  
Single Line Question Option : No Option Orientation : Vertical

Correct : 1 Wrong : 0.25

नीचे दी गई तालिका को ध्यान से पढ़ें और पूछे गए सवाल का जवाब दीजिए।

#### वर्षवार ग्रामीण विद्युतीकरण

वर्ष	विद्युतीकृत किये गए गांवों की संख्या
1990-91	110286
1991-92	6046
1992-93	3669
1993-94	3669
1994-95	3954
1995-96	4086
1996-97	3843

कौन से वर्ष में 4086

Options :

1. ✘ 1996-97
2. ✘ 1994-95
3. ✔ 1995-96
4. ✘ 1992-93

Question Number : 38 Question Id : 7368155492 Question Type : MCQ Option Shuffling : Yes Display Question Number : Yes  
Single Line Question Option : No Option Orientation : Vertical

Correct : 1 Wrong : 0.25

Study the following table carefully and answer the question that follows.

#### YEAR WISE VILLAGE ELECTRIFICATION

YEAR	NUMBER OF VILLAGES ELECTRIFIED
1990-91	110286
1991-92	6046
1992-93	3669
1993-94	3669
1994-95	3954
1995-96	4086
1996-97	3843

In which year, less number of villages were electrified?

Options :

1. ✘ 1996-97
2. ✔ 1992-93
3. ✘ 1995-96
4. ✘ 1991-92

Question Number : 38 Question Id : 7368155492 Question Type : MCQ Option Shuffling : Yes Display Question Number : Yes  
Single Line Question Option : No Option Orientation : Vertical

Correct : 1 Wrong : 0.25



नीचे दी गई तालिका को ध्यान से पढ़ें और पूछे गए सवाल का जवाब दीजिए।

वर्षवार ग्रामीण विद्युतीकरण

वर्ष	विद्युतीकृत किये गए गांवों की संख्या
1990-91	110286
1991-92	6046
1992-93	3669
1993-94	3669
1994-95	3954
1995-96	4086
1996-97	3843

कौन से वर्ष में, कम गांवों का विद्युतीकरण किया गया था?

Options :

- ✘ 1996-97
- ✔ 1992-93
- ✘ 1995-96
- ✘ 1991-92

Question Number : 39 Question Id : 7368155493 Question Type : MCQ Option Shuffling : Yes Display Question Number : Yes  
Single Line Question Option : No Option Orientation : Vertical

Correct : 1 Wrong : 0.25

The area of a square field is  $\frac{5}{4}$  hectare. Find the length of its diagonal in meters.

Options :

- ✔  $50\sqrt{10}$  mts
- ✘  $50\sqrt{2}$  mts
- ✘ 40 mts
- ✘ 25 mts

Question Number : 39 Question Id : 7368155493 Question Type : MCQ Option Shuffling : Yes Display Question Number : Yes  
Single Line Question Option : No Option Orientation : Vertical

Correct : 1 Wrong : 0.25

एक वर्ग क्षेत्र का क्षेत्रफल  $\frac{5}{4}$  हैक्टर है। इसके विकर्ण की लंबाई को मीटर में पता लगाएं?

Options :

- ✔  $50\sqrt{10}$  मीटर
- ✘  $50\sqrt{2}$  मीटर
- ✘ 40 मीटर

4. ✘ 25 मीटर

Question Number : 40 Question Id : 7368155494 Question Type : MCQ Option Shuffling : Yes Display Question Number : Yes  
Single Line Question Option : No Option Orientation : Vertical

Correct : 1 Wrong : 0.25

The area of an equilateral triangle is  $16\sqrt{3}cm^2$ . Find the length of its side.

Options :

1. ✔ 8 cm
2. ✘ 4.5 cm
3. ✘ 8.45 cm
4. ✘ 4.25 cm

Question Number : 40 Question Id : 7368155494 Question Type : MCQ Option Shuffling : Yes Display Question Number : Yes  
Single Line Question Option : No Option Orientation : Vertical

Correct : 1 Wrong : 0.25

एक समभुज त्रिकोण का क्षेत्रफल  $16\sqrt{3}$  वर्ग सें.मी. है। इसके भुजा की लंबाई को ज्ञात करें।

Options :

1. ✔ 8 सें.मी.
2. ✘ 4.5 सें.मी.
3. ✘ 8.45 सें.मी.
4. ✘ 4.25 सें.मी.

Question Number : 41 Question Id : 7368155495 Question Type : MCQ Option Shuffling : Yes Display Question Number : Yes  
Single Line Question Option : No Option Orientation : Vertical

Correct : 1 Wrong : 0.25

The diameter of the wheel of a motor cycle is 21 cm. How many revolutions will it make to travel 3.3km?

Options :

1. ✔ 5000
2. ✘ 6000
3. ✘ 6500
4. ✘ 4500

Question Number : 41 Question Id : 7368155495 Question Type : MCQ Option Shuffling : Yes Display Question Number : Yes  
Single Line Question Option : No Option Orientation : Vertical

Correct : 1 Wrong : 0.25

एक मोटर साइकिल के पहिये का व्यास 21 सें.मी. है। कितने आवर्तनों में 3.3 कि.मी. की यात्रा को यह पूरा करेगा?

Options :

1. ✔ 5000
2. ✘ 6000

3. ✘ 6500

4. ✘ 4500

Question Number : 42 Question Id : 7368155496 Question Type : MCQ Option Shuffling : Yes Display Question Number : Yes  
Single Line Question Option : No Option Orientation : Vertical

Correct : 1 Wrong : 0.25

A car travels 860km in 12hours and another 540km in 8hours. Find the average speed of the car.

Options :

1. ✘ 52km/h

2. ✘ 50km/h

3. ✘ 65km/h

4. ✔ 70km/h

Question Number : 42 Question Id : 7368155496 Question Type : MCQ Option Shuffling : Yes Display Question Number : Yes  
Single Line Question Option : No Option Orientation : Vertical

Correct : 1 Wrong : 0.25

एक कार 12 घंटों में 860 कि.मी. और 8 घंटों में अगले 540 कि.मी. की यात्रा करती है। कार की औसत गति को ज्ञात करें।

Options :

1. ✘ 52 कि.मी./घंटा

2. ✘ 50 कि.मी./घंटा

3. ✘ 65 कि.मी./घंटा

4. ✔ 70 कि.मी./घंटा

Question Number : 43 Question Id : 7368155497 Question Type : MCQ Option Shuffling : Yes Display Question Number : Yes  
Single Line Question Option : No Option Orientation : Vertical

Correct : 1 Wrong : 0.25

A vehicle travels at 50km/h. How many meters will it travel in 18minutes?

Options :

1. ✔ 15000 mts

2. ✘ 15500 mts

3. ✘ 12000 mts

4. ✘ 14500 mts

Question Number : 43 Question Id : 7368155497 Question Type : MCQ Option Shuffling : Yes Display Question Number : Yes  
Single Line Question Option : No Option Orientation : Vertical

Correct : 1 Wrong : 0.25

एक वाहन 50 कि.मी./घंटा की गति से भ्रमण करता है। यह 18 मिनट में कितने मीटर की दूरी को तय करेगा?

Options :

1. ✔ 15000 मीटर

2. ✘ 15500 मीटर
3. ✘ 12000 मीटर
4. ✘ 14500 मीटर

Question Number : 44 Question Id : 7368155498 Question Type : MCQ Option Shuffling : Yes Display Question Number : Yes  
Single Line Question Option : No Option Orientation : Vertical

Correct : 1 Wrong : 0.25

Bhaskar can cover a certain distance in 2hr 15min by covering two-third of the distance at 4kmph and the rest at 5kmph. Find the total distance.

Options :

1. ✘ 9.3km
2. ✔ 9.64km
3. ✘ 9.5km
4. ✘ 9.4km

Question Number : 44 Question Id : 7368155498 Question Type : MCQ Option Shuffling : Yes Display Question Number : Yes  
Single Line Question Option : No Option Orientation : Vertical

Correct : 1 Wrong : 0.25

भास्कर एक निश्चित दूरी को 2 घंटे 15 मिनट में पूरा कर सकता है, जिसमें से दो-तिहाई 4 कि.मी./घंटा गति से और शेष 5 कि.मी./घंटा कि गति से तय कर सकता है। तो कुल दूरी को ज्ञात करें।

Options :

1. ✘ 9.3 कि.मी.
2. ✔ 9.64 कि.मी.
3. ✘ 9.5 कि.मी.
4. ✘ 9.4 कि.मी.

Question Number : 45 Question Id : 7368155499 Question Type : MCQ Option Shuffling : Yes Display Question Number : Yes  
Single Line Question Option : No Option Orientation : Vertical

Correct : 1 Wrong : 0.25

Nandini takes 14minutes to reach school from home. Neeraja takes 18minutes to cover the same distance. Find the ratio of time taken by Nandini to the time taken by Neeraja.

Options :

1. ✘ 3:9
2. ✘ 9:7
3. ✘ 7:3
4. ✔ 7:9

Question Number : 45 Question Id : 7368155499 Question Type : MCQ Option Shuffling : Yes Display Question Number : Yes  
Single Line Question Option : No Option Orientation : Vertical

Correct : 1 Wrong : 0.25

नंदिनी को घर से स्कूल तक पहुंचने के लिए 14 मिनट लगते हैं। नीरजा इतनी ही दूरी को तय करने के लिए 18 मिनट लेती है। नंदिनी द्वारा लिये गए समय की तुलना में नीरजा द्वारा लिये गए समय के अनुपात को ज्ञात करें।

Options :

1. ✘ 3:9
2. ✘ 9:7
3. ✘ 7:3
4. ✔ 7:9

Question Number : 46 Question Id : 7368155500 Question Type : MCQ Option Shuffling : Yes Display Question Number : Yes Single Line Question Option : No Option Orientation : Vertical

Correct : 1 Wrong : 0.25

Neha works in office for 7hours 30minutes and Lalitha works for 6hours in her office. Find the ratio of their working hours.

Options :

1. ✘ 4:5
2. ✔ 5:4
3. ✘ 3:5
4. ✘ 6:7

Question Number : 46 Question Id : 7368155500 Question Type : MCQ Option Shuffling : Yes Display Question Number : Yes Single Line Question Option : No Option Orientation : Vertical

Correct : 1 Wrong : 0.25

नेहा अपने कार्यालय में 7 घंटे 30 मिनट और ललिता अपने कार्यालय में 6 घंटे काम करती है। उनके काम के घंटों के अनुपात को ज्ञात करें।

Options :

1. ✘ 4:5
2. ✔ 5:4
3. ✘ 3:5
4. ✘ 6:7

Question Number : 47 Question Id : 7368155501 Question Type : MCQ Option Shuffling : Yes Display Question Number : Yes Single Line Question Option : No Option Orientation : Vertical

Correct : 1 Wrong : 0.25

The ratio of times taken by A and B to finish a piece of work is 5:3. If A completes the work in 20days, then find the time taken by B to complete the work.

Options :

1. ✘ 19days
2. ✘ 15days
3. ✘ 20days
4. ✔ 12days

Question Number : 47 Question Id : 7368155501 Question Type : MCQ Option Shuffling : Yes Display Question Number : Yes  
Single Line Question Option : No Option Orientation : Vertical

Correct : 1 Wrong : 0.25

A और B द्वारा एक काम को पूरा करने के लिए लगे हुए समय का अनुपात 5:3 है।  
यदि A काम को 20 दिनों में पूरा करता है, तो B द्वारा काम को पूरा करने के लिये लगे हुए समय को ज्ञात करें।

Options :

1. ✘ 19 दिन
2. ✘ 15 दिन
3. ✘ 20 दिन
4. ✔ 12 दिन

Question Number : 48 Question Id : 7368155502 Question Type : MCQ Option Shuffling : Yes Display Question Number : Yes  
Single Line Question Option : No Option Orientation : Vertical

Correct : 1 Wrong : 0.25

Keerthi can do a work in 3 days and Lara is 25% more expert than Keerthi to complete the same work, then find the total time taken to complete the work by Lara.

Options :

1. ✔  $2\frac{2}{5}$  days
2. ✘  $4\frac{1}{2}$  days
3. ✘ 4 days
4. ✘ 6 days

Question Number : 48 Question Id : 7368155502 Question Type : MCQ Option Shuffling : Yes Display Question Number : Yes  
Single Line Question Option : No Option Orientation : Vertical

Correct : 1 Wrong : 0.25

कीर्ति एक काम को 3 दिनों में कर सकती हैं, और लारा उसी काम को कीर्ति की तुलना में 25% अधिक अच्छे तरीके से कर सकती है, तो लारा द्वारा काम को पूरा करने के लिए, लिये गए कुल समय को ज्ञात करें।

Options :

1. ✔  $2\frac{2}{5}$  दिन
2. ✘  $4\frac{1}{2}$  दिन
3. ✘ 4 दिन
4. ✘ 6 दिन

Question Number : 49 Question Id : 7368155503 Question Type : MCQ Option Shuffling : Yes Display Question Number : Yes  
Single Line Question Option : No Option Orientation : Vertical

Correct : 1 Wrong : 0.25

If A can do a piece of work in 10 days, B can do the same in 5 days and C can do the same work in 15 days, then working together, how many days will they take to complete the work?

Options :

1. ✘  $2\frac{2}{11}$  days
2. ✘ 9 days
3. ✘  $2\frac{1}{2}$  days
4. ✔  $2\frac{8}{11}$  days

Question Number : 49 Question Id : 7368155503 Question Type : MCQ Option Shuffling : Yes Display Question Number : Yes Single Line Question Option : No Option Orientation : Vertical

Correct : 1 Wrong : 0.25

यदि A एक काम को 10 दिनों में कर सकता है, B उसी काम को 5 दिनों में और C उसी काम को 15 दिनों में कर सकता है, तो एक साथ मिलकर काम को पूरा करने के लिए उन्हें कितने दिन लगेंगे?

Options :

1. ✘  $2\frac{2}{11}$  दिन
2. ✘ 9 दिन
3. ✘  $2\frac{1}{2}$  दिन
4. ✔  $2\frac{8}{11}$  दिन

Question Number : 50 Question Id : 7368155504 Question Type : MCQ Option Shuffling : Yes Display Question Number : Yes Single Line Question Option : No Option Orientation : Vertical

Correct : 1 Wrong : 0.25

25 men can complete a work in 21 days. 7 days after they started working, 15 more men joined them. How many days will they now take to complete the remaining work?

Options :

1. ✘  $6\frac{2}{3}$  days
2. ✘  $6\frac{1}{5}$  days
3. ✔  $8\frac{3}{4}$  days
4. ✘  $8\frac{1}{4}$  days

Question Number : 50 Question Id : 7368155504 Question Type : MCQ Option Shuffling : Yes Display Question Number : Yes Single Line Question Option : No Option Orientation : Vertical

Correct : 1 Wrong : 0.25

25 पुरुष 21 दिनों में एक काम को पूरा कर सकते हैं। काम शुरू करने के 7 दिन बाद, 15 और ज्यादा पुरुष उनमें शामिल हो गए। अब शेष काम को वे कितने दिनों में पूरा करेंगे?

Options :

1. ✘  $6\frac{2}{3}$  दिन
2. ✘  $6\frac{1}{5}$  दिन
3. ✔  $8\frac{3}{4}$  दिन
4. ✘  $8\frac{1}{4}$  दिन

### English Language

Section Id :	736815108
Section Number :	2
Section type :	Online
Mandatory or Optional:	Mandatory
Number of Questions:	32
Number of Questions to be attempted:	32
Section Marks:	50
Display Number Panel:	Yes
Group All Questions:	No

Sub-Section Number:	1
Sub-Section Id:	736815162
Question Shuffling Allowed :	No

Question Id : 7368155505 Question Type : COMPREHENSION Sub Question Shuffling Allowed : No Group Comprehension Questions : No

Question Numbers : (51 to 60)

Question Label : Comprehension



Read the following passage carefully and then choose the best option for each of the questions given under it:

A castle is a large building fortified against attack with thick walls, towers and belfries and a moat. Depending upon the status of the man who occupied it, a castle was a military base, a seat of government, a court, a stronghold for the surrounding region, and, principally, the private residence of its owner. The English Medieval castle had developed a definable form by the second half of the twelfth century: a stone keep or a simple tower within the castles and a gatehouse. The enclosure of the castle was known as 'bailey' and it was bounded by battlemented stone walls and defended by a ditch or a moat filled with water. However, when in the 13th and 14th centuries, because nobles and knights from England participated in the Crusades and experienced firsthand developments in siege warfare and in fortifications, these castles became more impregnable. Because the Crusaders took back and applied in their own countries, mainly to the form and structure of castles. One such modification was the addition of belfries to castles. A belfry is part of a steeple or a very tall tower and it is a 'fixed' structure on the enclosing walls of the castle; it is an immovable part of a larger structure with bells for ringing alarms. Originally a belfry denoted a "wooden siege tower on wheels" used by attackers to capture castle; soon, as defenders went on to build siege towers to directly oppose these mobile ones, it became immobile and an integral part of castles.

Sub questions

Question Number : 51 Question Id : 7368155506 Question Type : MCQ Option Shuffling : Yes Display Question Number : Yes  
Single Line Question Option : No Option Orientation : Vertical

Correct : 1 Wrong : 0.25

A suitable title for the passage is

Options :

1. ✘ The Form and Structure of the English Castle
2. ✘ Crusades and their effect on English castles
3. ✔ How Baileys and Belfries came to be in Castles
4. ✘ How the English Castle became more impregnable

Question Number : 52 Question Id : 7368155507 Question Type : MCQ Option Shuffling : Yes Display Question Number : Yes  
Single Line Question Option : No Option Orientation : Vertical

Correct : 1 Wrong : 0.25

A castle is "defended by a ditch or a moat filled with water". A moat is different from a ditch in that it is

Options :

1. ✘ Wider and deeper than a ditch
2. ✘ Natural like a ditch but deeper than a ditch
3. ✔ Moats are dug by castle builders to provide defence
4. ✘ Linked to a natural river unlike a ditch

Question Number : 53 Question Id : 7368155508 Question Type : MCQ Option Shuffling : Yes Display Question Number : Yes  
Single Line Question Option : No Option Orientation : Vertical

Correct : 1 Wrong : 0.25

The 'stone keep' in the English Medieval castle, according to the passage, was part of

Options :

1. ✘ The bailey
2. ✘ The battlements
3. ✔ The inside structures
4. ✘ The gatehouse

Question Number : 54 Question Id : 7368155509 Question Type : MCQ Option Shuffling : Yes Display Question Number : Yes  
Single Line Question Option : No Option Orientation : Vertical

Correct : 1 Wrong : 0.25

The passage mentions ‘...battlemented stone walls’; battlements mean

Options :

1. ✘ A place where battles are fought
2. ✘ A structure that would facilitate battles
3. ✘ Stone walls decorated with soldier models
4. ✔ Fortified stone walls with room for soldiers to attack and defend

Question Number : 55 Question Id : 7368155510 Question Type : MCQ Option Shuffling : Yes Display Question Number : Yes  
Single Line Question Option : No Option Orientation : Vertical

Correct : 1 Wrong : 0.25

Belfries or siege towers were probably added to

Options :

1. ✔ Battlemented stone walls
2. ✘ Stone keeps
3. ✘ Gatehouses
4. ✘ ‘Baileys’

Question Number : 56 Question Id : 7368155511 Question Type : MCQ Option Shuffling : Yes Display Question Number : Yes  
Single Line Question Option : No Option Orientation : Vertical

Correct : 1 Wrong : 0.25

A major part of the passage deals with the

Options :

1. ✘ Crusaders’ firsthand experience of the developments in siege warfare and in fortification, as seen in belfries
2. ✔ Changes that the medieval english castle underwent during the 13<sup>th</sup> and the 14<sup>th</sup> centuries, especially belfries
3. ✘ Influence of crusades on the form, structure and impregnability of the english medieval castles, exemplified in ‘belfries’
4. ✘ Influence of crusades on the form and structure of the english medieval castles, initiated by ‘belfries’

Question Number : 57 Question Id : 7368155512 Question Type : MCQ Option Shuffling : Yes Display Question Number : Yes  
Single Line Question Option : No Option Orientation : Vertical

Correct : 1 Wrong : 0.25

Originally belfries were mobile – movable over a terrain; they must have become extinct as

Options :

1. ✘ The construction of

2. ✘ The wooden towers on wheels would have demanded a lot of labour
3. ✘ The siege towers constructed could thwart and defeat the mobile ones
4. ✔ The wooden towers lost their surprise factor and became hard to make

Question Number : 58 Question Id : 7368155513 Question Type : MCQ Option Shuffling : Yes Display Question Number : Yes  
Single Line Question Option : No Option Orientation : Vertical

Correct : 1 Wrong : 0.25

The word closest in meaning to 'impregnable' is

Options :

1. ✘ Indestructible
2. ✘ Secure
3. ✔ Unconquerable
4. ✘ Sterile

Question Number : 59 Question Id : 7368155514 Question Type : MCQ Option Shuffling : Yes Display Question Number : Yes  
Single Line Question Option : No Option Orientation : Vertical

Correct : 1 Wrong : 0.25

The expression 'experienced firsthand' means {choose the closest one}

Options :

1. ✘ An experienced individual
2. ✘ Bought new
3. ✘ Direct experience
4. ✔ Personally experienced

Question Number : 60 Question Id : 7368155515 Question Type : MCQ Option Shuffling : Yes Display Question Number : Yes  
Single Line Question Option : No Option Orientation : Vertical

Correct : 1 Wrong : 0.25

The word opposite in meaning to the word 'fortified' as used in the passage is {choose the closest one}

Options :

1. ✘ Equipped
2. ✘ Unarmed
3. ✔ Weakened
4. ✘ Defenceless

Question Id : 7368155505 Question Type : COMPREHENSION Sub Question Shuffling Allowed : No Group Comprehension  
Questions : No

Question Numbers : (51 to 60)

Question Label : Comprehension

Read the following passage carefully and then choose the best option for each of the questions given under it:

A castle is a large building fortified against attack with thick walls, towers and belfries and a moat. Depending upon the status of the man who occupied it, a castle was a military base, a seat of government, a court, a stronghold for the surrounding region, and, principally, the private residence of its owner. The English Medieval castle had developed a definable form by the second half of the twelfth century: a stone keep or a simple tower within the castles and a gatehouse. The enclosure of the castle was known as 'bailey' and it was bounded by battlemented stone walls and defended by a ditch or a moat filled with water. However, when in the 13th and 14th centuries, because nobles and knights from England participated in the Crusades and experienced firsthand developments in siege warfare and in fortifications, these castles became more impregnable. Because the Crusaders took back and applied in their own countries, mainly to the form and structure of castles. One such modification was the addition of belfries to castles. A belfry is part of a steeple or a very tall tower and it is a 'fixed' structure on the enclosing walls of the castle; it is an immovable part of a larger structure with bells for ringing alarms. Originally a belfry denoted a "wooden siege tower on wheels" used by attackers to capture castle; soon, as defenders went on to build siege towers to directly oppose these mobile ones, it became immobile and an integral part of castles.

Sub questions

Question Number : 51 Question Id : 7368155506 Question Type : MCQ Option Shuffling : Yes Display Question Number : Yes  
Single Line Question Option : No Option Orientation : Vertical

Correct : 1 Wrong : 0.25

A suitable title for the passage is

Options :

1. ✘ The Form and Structure of the English Castle
2. ✘ Crusades and their effect on English castles
3. ✔ How Baileys and Belfries came to be in Castles
4. ✘ How the English Castle became more impregnable

Question Number : 52 Question Id : 7368155507 Question Type : MCQ Option Shuffling : Yes Display Question Number : Yes  
Single Line Question Option : No Option Orientation : Vertical

Correct : 1 Wrong : 0.25

A castle is "defended by a ditch or a moat filled with water". A moat is different from a ditch in that it is

Options :

1. ✘ Wider and deeper than a ditch
2. ✘ Natural like a ditch but deeper than a ditch
3. ✔ Moats are dug by castle builders to provide defence
4. ✘ Linked to a natural river unlike a ditch

Question Number : 53 Question Id : 7368155508 Question Type : MCQ Option Shuffling : Yes Display Question Number : Yes  
Single Line Question Option : No Option Orientation : Vertical

Correct : 1 Wrong : 0.25

The 'stone keep' in the English Medieval castle, according to the passage, was part of

Options :

1. ✘ The bailey
2. ✘ The battlements
3. ✔ The inside structures
4. ✘ The gatehouse

Question Number : 54 Question Id : 7368155509 Question Type : MCQ Option Shuffling : Yes Display Question Number : Yes  
Single Line Question Option : No Option Orientation : Vertical

Correct : 1 Wrong : 0.25

The passage mentions '...battlemented stone walls'; battlements mean

Options :

1. ✘ A place where battles are fought
2. ✘ A structure that would facilitate battles
3. ✘ Stone walls decorated with soldier models
4. ✔ Fortified stone walls with room for soldiers to attack and defend

Question Number : 55 Question Id : 7368155510 Question Type : MCQ Option Shuffling : Yes Display Question Number : Yes  
Single Line Question Option : No Option Orientation : Vertical

Correct : 1 Wrong : 0.25

Belfries or siege towers were probably added to

Options :

1. ✓ Battlemented stone walls

2. ✗ Stone keeps

3. ✗ Gatehouses

4. ✗ 'Baileys'

Question Number : 56 Question Id : 7368155511 Question Type : MCQ Option Shuffling : Yes Display Question Number : Yes  
Single Line Question Option : No Option Orientation : Vertical

Correct : 1 Wrong : 0.25

A major part of the passage deals with the

Options :

1. ✗ Crusaders' firsthand experience of the developments in siege warfare and in fortification, as seen in belfries

2. ✓ Changes that the medieval english castle underwent during the 13<sup>th</sup> and the 14<sup>th</sup> centuries, especially belfries

3. ✗ Influence of crusades on the form, structure and impregnability of the english medieval castles, exemplified in 'belfries'

4. ✗ Influence of crusades on the form and structure of the english medieval castles, initiated by 'belfries'

Question Number : 57 Question Id : 7368155512 Question Type : MCQ Option Shuffling : Yes Display Question Number : Yes  
Single Line Question Option : No Option Orientation : Vertical

Correct : 1 Wrong : 0.25

Originally belfries were mobile - movable over a terrain; they must have become extinct as

Options :

1. ✗ The construction of siege towers could not accommodate wheels

2. ✗ The wooden towers on wheels would have demanded alot of labour

3. ✗ The siege towers constructed could thwart and defeat the mobile ones

4. ✓ The wooden towers lost their surprise factor and became hard to make

Question Number : 58 Question Id : 7368155513 Question Type : MCQ Option Shuffling : Yes Display Question Number : Yes  
Single Line Question Option : No Option Orientation : Vertical

Correct : 1 Wrong : 0.25

The word closest in meaning to 'impregnable' is

Options :

1. ✗ Indestructible

2. ✗ Secure

3. ✓ Unconquerable

4. ✗ Sterile

Question Number : 59 Question Id : 7368155514 Question Type : MCQ Option Shuffling : Yes Display Question Number : Yes  
Single Line Question Option : No Option Orientation : Vertical

Correct : 1 Wrong : 0.25

The expression 'exp... est one}'

Options :

- ✘ An experienced individual
- ✘ Bought new
- ✘ Direct experience
- ✔ Personally experienced

Question Number : 60 Question Id : 7368155515 Question Type : MCQ Option Shuffling : Yes Display Question Number : Yes  
Single Line Question Option : No Option Orientation : Vertical

Correct : 1 Wrong : 0.25

The word opposite in meaning to the word 'fortified' as used in the passage is{choose the closest one}

Options :

- ✘ Equipped
- ✘ Unarmed
- ✔ Weakened
- ✘ Defenceless

Sub-Section Number: 2  
Sub-Section Id: 736815163  
Question Shuffling Allowed : No

Question Id : 7368155516 Question Type : COMPREHENSION Sub Question Shuffling Allowed : No Group Comprehension Questions : No

Question Numbers : (61 to 70)

Question Label : Comprehension

Given below is a passage with ten blanks, numbered from 11 to 20. Fill in the blanks by choosing the correct option given against the corresponding Question number:

Humpty Dumpty was not a person at all, but a massive siege cannon that was used by Royalist forces (the king's men) against Parliamentarians during the English Civil War that raged between 1642 and 1651. During the siege of Colchester in 1648, the Royalists \_\_\_\_\_ (11) Humpty Dumpty to the top of the church \_\_\_\_\_ (12) of St Mary-at-the-Walls, and for eleven weeks Humpty (sat on the wall and) \_\_\_\_\_ (13) away at the attacking Parliamentarian Roundhead \_\_\_\_\_ (14), defending the town. Humpty's great \_\_\_\_\_ (15) came when the church tower was \_\_\_\_\_ (16) blown up by the Roundheads, and he couldn't be put \_\_\_\_\_ (17) again as he had fallen into, and subsequently had \_\_\_\_\_ (18) buried, deep in the surrounding marshland. Without the \_\_\_\_\_ (19) Humpty Dumpty to defend them, the king's men were soon \_\_\_\_\_ (20) by the Parliamentarian soldiers

Sub questions

Question Number : 61 Question Id : 7368155517 Question Type : MCQ Option Shuffling : Yes Display Question Number : Yes  
Single Line Question Option : No Option Orientation : Vertical

Correct : 1 Wrong : 0.25

Fill in the blanks by choosing the correct option given against the corresponding Question number:

Options :

- ✘ hailed

Latest Sarkari Jobs, Govt Exam Results,  
Vacancies and updates on one click

Know More

2. ✘ haloed
3. ✘ hired
4. ✔ hauled

Question Number : 62 Question Id : 7368155518 Question Type : MCQ Option Shuffling : Yes Display Question Number : Yes  
Single Line Question Option : No Option Orientation : Vertical

Correct : 1 Wrong : 0.25

Fill in the blanks by choosing the correct option given against the corresponding Question number:

Options :

1. ✔ tower
2. ✘ top
3. ✘ trench
4. ✘ pulpit

Question Number : 63 Question Id : 7368155519 Question Type : MCQ Option Shuffling : Yes Display Question Number : Yes  
Single Line Question Option : No Option Orientation : Vertical

Correct : 1 Wrong : 0.25

Fill in the blanks by choosing the correct option given against the corresponding Question number:

Options :

1. ✘ kicked
2. ✘ shot
3. ✘ gunned
4. ✔ blasted

Question Number : 64 Question Id : 7368155520 Question Type : MCQ Option Shuffling : Yes Display Question Number : Yes  
Single Line Question Option : No Option Orientation : Vertical

Correct : 1 Wrong : 0.25

Fill in the blanks by choosing the correct option given against the corresponding Question number:

Options :

1. ✘ trips
2. ✔ troops
3. ✘ traps
4. ✘ tropes

Question Number : 65 Question Id : 7368155521 Question Type : MCQ Option Shuffling : Yes Display Question Number : Yes  
Single Line Question Option : No Option Orientation : Vertical

Correct : 1 Wrong : 0.25

Fill in the blanks by choosing the correct option given against the corresponding Question number:

Options :

1. ✘ triumph
2. ✘ victory
3. ✘ defeat



4. ✓ fall

Question Number : 66 Question Id : 7368155522 Question Type : MCQ Option Shuffling : Yes Display Question Number : Yes  
Single Line Question Option : No Option Orientation : Vertical

Correct : 1 Wrong : 0.25

Fill in the blanks by choosing the correct option given against the corresponding Question number:

Options :

1. ✓ eventually

2. ✗ evenly

3. ✗ exactly

4. ✗ eminently

Question Number : 67 Question Id : 7368155523 Question Type : MCQ Option Shuffling : Yes Display Question Number : Yes  
Single Line Question Option : No Option Orientation : Vertical

Correct : 1 Wrong : 0.25

Fill in the blanks by choosing the correct option given against the corresponding Question number:

Options :

1. ✗ through

2. ✗ upon

3. ✗ across

4. ✓ together

Question Number : 68 Question Id : 7368155524 Question Type : MCQ Option Shuffling : Yes Display Question Number : Yes  
Single Line Question Option : No Option Orientation : Vertical

Correct : 1 Wrong : 0.25

Fill in the blanks by choosing the correct option given against the corresponding Question number:

Options :

1. ✗ turned

2. ✗ changed

3. ✓ become

4. ✗ come

Question Number : 69 Question Id : 7368155525 Question Type : MCQ Option Shuffling : Yes Display Question Number : Yes  
Single Line Question Option : No Option Orientation : Vertical

Correct : 1 Wrong : 0.25

Fill in the blanks by choosing the correct option given against the corresponding Question number:

Options :

1. ✗ brightly

2. ✗ spritely

3. ✓ mighty

4. ✗ lightly

Question Number : 70 Question  
Single Line Question Option : N

Latest Sarkari Jobs, Govt Exam Results,  
Vacancies and updates on one click

Know More

lay Question Number : Yes

Correct : 1 Wrong : 0.25

Fill in the blanks by choosing the correct option given against the corresponding Question number:

Options :

1. ✘ triumphant
2. ✔ overrun
3. ✘ flooded
4. ✘ crowned

Question Id : 7368155516 Question Type : COMPREHENSION Sub Question Shuffling Allowed : No Group Comprehension Questions : No

Question Numbers : (61 to 70)

Question Label : Comprehension

Given below is a passage with ten blanks, numbered from 11 to 20. Fill in the blanks by choosing the correct option given against the corresponding Question number:

Humpty Dumpty was not a person at all, but a massive siege cannon that was used by Royalist forces (the king's men) against Parliamentarians during the English Civil War that raged between 1642 and 1651. During the siege of Colchester in 1648, the Royalists \_\_\_\_\_ (11) Humpty Dumpty to the top of the church \_\_\_\_\_ (12) of St Mary-at-the-Walls, and for eleven weeks Humpty (sat on the wall and) \_\_\_\_\_ (13) away at the attacking Parliamentarian Roundhead \_\_\_\_\_ (14), defending the town. Humpty's great \_\_\_\_\_ (15) came when the church tower was \_\_\_\_\_ (16) blown up by the Roundheads, and he couldn't be put \_\_\_\_\_ (17) again as he had fallen into, and subsequently had \_\_\_\_\_ (18) buried, deep in the surrounding marshland. Without the \_\_\_\_\_ (19) Humpty Dumpty to defend them, the king's men were soon \_\_\_\_\_ (20) by the Parliamentarian soldiers.

Sub questions

Question Number : 61 Question Id : 7368155517 Question Type : MCQ Option Shuffling : Yes Display Question Number : Yes Single Line Question Option : No Option Orientation : Vertical

Correct : 1 Wrong : 0.25

Fill in the blanks by choosing the correct option given against the corresponding Question number:

Options :

1. ✘ hailed
2. ✘ haloed
3. ✘ hired
4. ✔ hauled

Question Number : 62 Question Id : 7368155518 Question Type : MCQ Option Shuffling : Yes Display Question Number : Yes Single Line Question Option : No Option Orientation : Vertical

Correct : 1 Wrong : 0.25

Fill in the blanks by choosing the correct option given against the corresponding Question number:

Options :

1. ✔ tower
2. ✘ top
3. ✘ trench

4. ✘ pulpit

Question Number : 63 Question Id : 7368155519 Question Type : MCQ Option Shuffling : Yes Display Question Number : Yes  
Single Line Question Option : No Option Orientation : Vertical

Correct : 1 Wrong : 0.25

Fill in the blanks by choosing the correct option given against the corresponding Question number:

Options :

1. ✘ kicked

2. ✘ shot

3. ✘ gunned

4. ✔ blasted

Question Number : 64 Question Id : 7368155520 Question Type : MCQ Option Shuffling : Yes Display Question Number : Yes  
Single Line Question Option : No Option Orientation : Vertical

Correct : 1 Wrong : 0.25

Fill in the blanks by choosing the correct option given against the corresponding Question number:

Options :

1. ✘ trips

2. ✔ troops

3. ✘ traps

4. ✘ tropes

Question Number : 65 Question Id : 7368155521 Question Type : MCQ Option Shuffling : Yes Display Question Number : Yes  
Single Line Question Option : No Option Orientation : Vertical

Correct : 1 Wrong : 0.25

Fill in the blanks by choosing the correct option given against the corresponding Question number:

Options :

1. ✘ triumph

2. ✘ victory

3. ✘ defeat

4. ✔ fall

Question Number : 66 Question Id : 7368155522 Question Type : MCQ Option Shuffling : Yes Display Question Number : Yes  
Single Line Question Option : No Option Orientation : Vertical

Correct : 1 Wrong : 0.25

Fill in the blanks by choosing the correct option given against the corresponding Question number:

Options :

1. ✔ eventually

2. ✘ evenly

3. ✘ exactly

4. ✘ eminently

Question Number : 67 Question Id : 7368155523 Question Type : MCQ Option Shuffling : Yes Display Question Number : Yes  
Single Line Question Option : No Option Orientation : Vertical

Correct : 1 Wrong : 0.25

Fill in the blanks by choosing the correct option given against the corresponding Question number:

Options :

1. ✘ through

2. ✘ upon

3. ✘ across

4. ✔ together

Question Number : 68 Question Id : 7368155524 Question Type : MCQ Option Shuffling : Yes Display Question Number : Yes  
Single Line Question Option : No Option Orientation : Vertical

Correct : 1 Wrong : 0.25

Fill in the blanks by choosing the correct option given against the corresponding Question number:

Options :

1. ✘ turned

2. ✘ changed

3. ✔ become

4. ✘ come

Question Number : 69 Question Id : 7368155525 Question Type : MCQ Option Shuffling : Yes Display Question Number : Yes  
Single Line Question Option : No Option Orientation : Vertical

Correct : 1 Wrong : 0.25

Fill in the blanks by choosing the correct option given against the corresponding Question number:

Options :

1. ✘ brightly

2. ✘ spritely

3. ✔ mighty

4. ✘ lightly

Question Number : 70 Question Id : 7368155526 Question Type : MCQ Option Shuffling : Yes Display Question Number : Yes  
Single Line Question Option : No Option Orientation : Vertical

Correct : 1 Wrong : 0.25

Fill in the blanks by choosing the correct option given against the corresponding Question number:

Options :

1. ✘ triumphant

2. ✔ overrun

3. ✘ flooded

4. ✘ crowned

Sub-Section Number: 3  
Sub-Section Id: 736815164  
Question Shuffling Allowed : Yes

Question Number : 71 Question Id : 7368155527 Question Type : MCQ Option Shuffling : Yes Display Question Number : Yes  
Single Line Question Option : No Option Orientation : Vertical

Correct : 1 Wrong : 0.25

Given below is a set of five sentences, numbered 1 to 5, which are not in a meaningful order. Choose from the options given, the order which will be acceptable and meaningful:

1. The distinction between the passivity of the chorus and the activity of the actors is central to the artistry of the Greek tragedies.
2. The chorus in early Greek drama was a group of actors who described and commented upon the main action of a play.
3. Their judgment is the verdict of history.
4. In drama and music, chorus refers to those who perform vocally in a group.
5. While the tragic protagonists act out their defiance of the limits subscribed by the gods for man, the chorus expresses the fears, hopes, and judgment of the polity, the average citizens

Options :

1. ✘ 3,2,1,5,4
2. ✔ 4,2,5,1,3
3. ✘ 1,2,3,4,5
4. ✘ 4,6,2,3,1

Question Number : 71 Question Id : 7368155527 Question Type : MCQ Option Shuffling : Yes Display Question Number : Yes  
Single Line Question Option : No Option Orientation : Vertical

Correct : 1 Wrong : 0.25

Given below is a set of five sentences, numbered 1 to 5, which are not in a meaningful order. Choose from the options given, the order which will be acceptable and meaningful:

1. The distinction between the passivity of the chorus and the activity of the actors is central to the artistry of the Greek tragedies.
2. The chorus in early Greek drama was a group of actors who described and commented upon the main action of a play.
3. Their judgment is the verdict of history.
4. In drama and music, chorus refers to those who perform vocally in a group.
5. While the tragic protagonists act out their defiance of the limits subscribed by the gods for man, the chorus expresses the fears, hopes, and judgment of the polity, the average citizens

Options :

1. ✘ 3,2,1,5,4
2. ✔ 4,2,5,1,3
3. ✘ 1,2,3,4,5
4. ✘ 4,6,2,3,1

Question Number : 72 Question Id : 7368155528 Question Type : MCQ Option Shuffling : Yes Display Question Number : Yes Single Line Question Option : No Option Orientation : Vertical

Correct : 1 Wrong : 0.25

Given below is a set of five sentences, numbered 1 to 5, which are not in a meaningful order. Choose from the options given, the order which will be acceptable and meaningful:

1. It had been thoroughly inspected the day of its fatal voyage.
2. It is always the case that Naval architects never claim that a ship is unsinkable.
3. Yet hours later, the ferry rolled over and sank in a cold, stormy night.
4. Strangely, the survivors were men in the prime of life, whilst most of the dead were women, children and the elderly.
5. But the sinking of a well-designed and carefully maintained passenger-and-car ferry should have never have happened

Options :

1. ✘ 2,1,4,3,5
2. ✔ 2,5,1,3,4
3. ✘ 2,1,5,3,4
4. ✘ 2,4,1,3,5

Correct : 1 Wrong : 0.25

Given below is a set of five sentences, numbered 1 to 5, which are not in a meaningful order. Choose from the options given, the order which will be acceptable and meaningful:

1. It had been thoroughly inspected the day of its fatal voyage.
2. It is always the case that Naval architects never claim that a ship is unsinkable.
3. Yet hours later, the ferry rolled over and sank in a cold, stormy night.
4. Strangely, the survivors were men in the prime of life, whilst most of the dead were women, children and the elderly.
5. But the sinking of a well-designed and carefully maintained passenger-and-car ferry should have never have happened

Options :

1. ✘ 2,1,4,3,5
2. ✔ 2,5,1,3,4
3. ✘ 2,1,5,3,4
4. ✘ 2,4,1,3,5

Correct : 1 Wrong : 0.25

Given below is a set of five sentences, numbered 1 to 5, which are not in a meaningful order. Choose from the options given, the order which will be acceptable and meaningful:

1. Lack of sleep alters brain chemicals to bring on cannabis-style 'munchies'.
2. These chemicals could also increase the pleasure of eating sweet or salty high-fat foods.
3. Sleep loss raises the risk of obesity, but the reasons have been unclear.
4. Possibly, we can conclude that insufficient sleep disrupts hormones that govern appetite and satiety.
5. A recent experiment shows sleep deprivation may cause overeating by boosting chemicals for appetite

Options :

1. ✘ 3,5,1,2,4
2. ✔ 3,4,5,1,2
3. ✘ 3,2,1,5,4
4. ✘ 3,1,2,4,5

Correct : 1 Wrong : 0.25

Given below is a set of five sentences, numbered 1 to 5, which are not in a meaningful order. Choose from the options given, the order which will be acceptable and meaningful:

1. Lack of sleep alters brain chemicals to bring on cannabis-style 'munchies'.
2. These chemicals could also increase the pleasure of eating sweet or salty high-fat foods.
3. Sleeploss raises the risk of obesity, but the reasons have been unclear.
4. Possibly, we can conclude that insufficient sleep disrupts hormones that govern appetite and satiety.
5. A recent experiment shows sleep deprivation may cause overeating by boosting chemicals for appetite

Options :

1. ✘ 3,5,1,2,4
2. ✔ 3,4,5,1,2
3. ✘ 3,2,1,5,4
4. ✘ 3,1,2,4,5

Correct : 1 Wrong : 0.25

Given below is a sentence/famous saying, the words/segments of which have been jumbled up and numbered. Choose the right order of the words/segments from the given options:

road to hell/are paved/good/with/intentions/the  
1                      2                      3                      4                      5                      6

Options :

1. ✘ 6,2,1,3,5,4
2. ✔ 6,1,2,4,3,5
3. ✘ 6,1,2,3,5,4
4. ✘ 6,1,2,3,4,5

Correct : 1 Wrong : 0.25



Given below is a sentence/famous saying, the words/segments of which have been jumbled up and numbered. Choose the right order of the words/segments from the given options:

road to hell/are paved/good/with/intentions/the

1                      2                      3                      4                      5                      6

Options :

1. ✘ 6,2,1,3,5,4
2. ✔ 6,1,2,4,3,5
3. ✘ 6,1,2,3,5,4
4. ✘ 6,1,2,3,4,5

Question Number : 75 Question Id : 7368155531 Question Type : MCQ Option Shuffling : Yes Display Question Number : Yes  
Single Line Question Option : No Option Orientation : Vertical

Correct : 1 Wrong : 0.25

Given below is a sentence/famous saying, the words/segments of which have been jumbled up and numbered. Choose the right order of the words/segments from the given options:

hay/while/shines/sun/the/make

1                      2                      3                      4                      5                      6

Options :

1. ✔ 6,1,2,5,4,3
2. ✘ 6,2,1,5,4,3
3. ✘ 6,1,2,3,4,5
4. ✘ 6,1,2,4,3,5

Question Number : 75 Question Id : 7368155531 Question Type : MCQ Option Shuffling : Yes Display Question Number : Yes  
Single Line Question Option : No Option Orientation : Vertical

Correct : 1 Wrong : 0.25

Given below is a sentence/famous saying, the words/segments of which have been jumbled up and numbered. Choose the right order of the words/segments from the given options:

hay/while/shines/sun/the/make

1                      2                      3                      4                      5                      6

Options :

1. ✔ 6,1,2,5,4,3
2. ✘ 6,2,1,5,4,3
3. ✘ 6,1,2,3,4,5
4. ✘ 6,1,2,4,3,5

Question Number : 76 Question Id : 7368155532 Question Type : MCQ Option Shuffling : Yes Display Question Number : Yes  
Single Line Question Option : No Option Orientation : Vertical

Correct : 1 Wrong : 0.25

Given below is an ungrammatical, defective, sentence and there are 4 options given. One of them is the correct and improved form of the sentence. Choose the one which improves the given sentence:

**Some people doesn't understand promise they're making when they make they.**

Options :

1. ✘ Some people don't understand the promise they're making when they make them.
2. ✘ Some people don't understand the promises they're making when they make they.
3. ✔ Some people don't understand the promises they're making when they make them.
4. ✘ Some people doesn't understand the promises they're making when they make them

Question Number : 76 Question Id : 7368155532 Question Type : MCQ Option Shuffling : Yes Display Question Number : Yes  
Single Line Question Option : No Option Orientation : Vertical

Correct : 1 Wrong : 0.25

Given below is an ungrammatical, defective, sentence and there are 4 options given. One of them is the correct and improved form of the sentence. Choose the one which improves the given sentence:

**Some people doesn't understand promise they're making when they make they.**

Options :

1. ✘ Some people don't understand the promise they're making when they make them.
2. ✘ Some people don't understand the promises they're making when they make they.
3. ✔ Some people don't understand the promises they're making when they make them.
4. ✘ Some people doesn't understand the promises they're making when they make them

Question Number : 77 Question Id : 7368155533 Question Type : MCQ Option Shuffling : Yes Display Question Number : Yes  
Single Line Question Option : No Option Orientation : Vertical

Correct : 1 Wrong : 0.25

Given below is an ungrammatical, defective, sentence and there are 4 options given. One of them is the correct and improved form of the sentence. Choose the one which improves the given sentence:

**Don't cry at it's over, smile because it happen.**

Options :

Latest Sarkari Jobs, Govt Exam Results,  
Vacancies and updates on one click

[Know More](#)

1. ✘ Don't cry because it's over, smile because it happen.
2. ✔ Don't cry because it's over, smile because it happened.
3. ✘ Don't cry since it's over, smile because it happened.
4. ✘ Don't cry it's over, smile because it happened

Question Number : 77 Question Id : 7368155533 Question Type : MCQ Option Shuffling : Yes Display Question Number : Yes  
Single Line Question Option : No Option Orientation : Vertical

Correct : 1 Wrong : 0.25

Given below is an ungrammatical, defective, sentence and there are 4 options given. One of them is the correct and improved form of the sentence. Choose the one which improves the given sentence:

**Don't cry at it's over, smile because it happen.**

Options :

1. ✘ Don't cry because it's over, smile because it happen.
2. ✔ Don't cry because it's over, smile because it happened.
3. ✘ Don't cry since it's over, smile because it happened.
4. ✘ Don't cry it's over, smile because it happened

Question Number : 78 Question Id : 7368155534 Question Type : MCQ Option Shuffling : Yes Display Question Number : Yes  
Single Line Question Option : No Option Orientation : Vertical

Correct : 1 Wrong : 0.25

Given below is an ungrammatical, defective, sentence and there are 4 options given. One of them is the correct and improved form of the sentence. Choose the one which improves the given sentence:

**True happiness is enjoy present, without anxious dependence up on the future.**

Options :

1. ✔ True happiness is to enjoy the present, without anxious dependence upon the future.
2. ✘ True happiness is to enjoy present, without anxious dependence up on the future.
3. ✘ True happiness is enjoy the present, without anxious dependence up on the future.
4. ✘ True happiness is enjoy the present, without anxious dependence upon the future

Question Number : 78 Question Id : 7368155534 Question Type : MCQ Option Shuffling : Yes Display Question Number : Yes  
Single Line Question Option : No Option Orientation : Vertical

Correct : 1 Wrong : 0.25

Given below is an ungrammatical, defective, sentence and there are 4 options given. One of them is the correct and improved form of the sentence. Choose the one which improves the given sentence:

**True happiness is enjoy present, without anxious dependence up on the future.**

Options :

1. ✓ the future.
2. ✗ True happiness is to enjoy present, without anxious dependence up on the future.
3. ✗ True happiness is enjoy the present, without anxious dependence up on the future.
4. ✗ True happiness is enjoy the present, without anxious dependence upon the future

Question Number : 79 Question Id : 7368155535 Question Type : MCQ Option Shuffling : Yes Display Question Number : Yes  
Single Line Question Option : No Option Orientation : Vertical

Correct : 1 Wrong : 0.25

Given below is an ungrammatical, defective, sentence and there are 4 options given. One of them is the correct and improved form of the sentence. Choose the one which improves the given sentence:

**What you want is a man in the heart of a poor boy and mind for a conqueror.**

Options :

1. ✗ What you want is a man in the heart of a poor boy and mind of a conqueror.
2. ✗ What you want is a man in the heart of a poor boy and the mind of a conqueror.
3. ✗ What you want is a man with the heart of a poor boy and mind for a conqueror.
4. ✓ What you want is a man with the heart of a poor boy and the mind of a conqueror

Question Number : 79 Question Id : 7368155535 Question Type : MCQ Option Shuffling : Yes Display Question Number : Yes  
Single Line Question Option : No Option Orientation : Vertical

Correct : 1 Wrong : 0.25

Given below is an ungrammatical, defective, sentence and there are 4 options given. One of them is the correct and improved form of the sentence. Choose the one which improves the given sentence:

**What you want is a man in the heart of a poor boy and mind for a conqueror.**

Options :

- What you want is a man in the heart of a poor boy and mind of a conqueror.
1. ✘
- What you want is a man in the heart of a poor boy and the mind of a conqueror.
2. ✘
- What you want is a man with the heart of a poor boy and mind for a conqueror.
3. ✘
- What you want is a man with the heart of a poor boy and the mind of a conqueror
4. ✔

Question Number : 80 Question Id : 7368155536 Question Type : MCQ Option Shuffling : Yes Display Question Number : Yes  
Single Line Question Option : No Option Orientation : Vertical

Correct : 1 Wrong : 0.25

Given below is an ungrammatical, defective, sentence and there are 4 options given. One of them is the correct and improved form of the sentence. Choose the one which improves the given sentence:

**A room without books is alike body without soul.**

Options :

1. ✘ A room without books is alike a body without a soul.
2. ✘ A room without books is alike body without soul.
3. ✔ A room without books is like a body without a soul
4. ✘ A room without books is like body without soul

Question Number : 80 Question Id : 7368155536 Question Type : MCQ Option Shuffling : Yes Display Question Number : Yes  
Single Line Question Option : No Option Orientation : Vertical

Correct : 1 Wrong : 0.25

Given below is an ungrammatical, defective, sentence and there are 4 options given. One of them is the correct and improved form of the sentence. Choose the one which improves the given sentence:

**A room without books is alike body without soul.**

Options :

1. ✘ A room without books is alike a body without a soul.
2. ✘ A room without books is alike body without soul.
3. ✔ A room without books islike a body without a soul
4. ✘ A room without books islike body without soul

Question Number : 81 Question Id : 7368155537 Question Type : MCQ Option Shuffling : Yes Display Question Number : Yes  
Single Line Question Option : No Option Orientation : Vertical

Correct : 1 Wrong : 0.25

Given below is a sentence which is to be transformed and rewritten as indicated in brackets and there are four options given. Choose the one which 'correctly' transforms the given sentence :

**He gifted her expensive solitaire ring on her birthday.**

**{Ask a question to which the answer would be the *italicized* phrase of the underlined one.}**

Options :

1. ✘ What did he gift her on her birthday?
2. ✘ What did she get from him on her birthday?
3. ✘ How cheap was the ring he gifted her on her birthday?
4. ✔ What kind of solitaire ring did he gift her on her birthday?

Question Number : 81 Question Id : 7368155537 Question Type : MCQ Option Shuffling : Yes Display Question Number : Yes  
Single Line Question Option : No Option Orientation : Vertical

Correct : 1 Wrong : 0.25

Given below is a sentence which is to be transformed and rewritten as indicated in brackets and there are four options given. Choose the one which 'correctly' transforms the given sentence :

**He gifted her expensive solitaire ring on her birthday.**

**{Ask a question to which the answer would be the *italicized* phrase of the underlined one.}**

Options :

1. ✘ What did he gift her on her birthday?
2. ✘ What did she get from him on her birthday?
3. ✘ How cheap was the ring he gifted her on her birthday?
4. ✔ What kind of solitaire ring did he gift her on her birthday?

Question Number : 82 Question Id : 7368155538 Question Type : MCQ Option Shuffling : Yes Display Question Number : Yes  
Single Line Question Option : No Option Orientation : Vertical

Correct : 1 Wrong : 0.25

Given below is a sentence which is to be transformed and rewritten as indicated in brackets and there are four options given. Choose the one which 'correctly' transforms the given sentence :

**The teacher gave a test. It was a tough one. Many students failed to get good marks. They complained (to the head teacher). {Combine all the four into simple sentence – do not change the focus}**

Options :

1. ✘ The teacher giving a test, that being tough, making many students failing to get good marks, the head teacher received a complaint about the test.
2. ✔ Failing to get good marks in the tough test given by the teacher, students complained to the head teacher.
3. ✘ The teacher's test being a tough one and preventing many students from getting good marks caused the students' complaint to the head teacher.
4. ✘ There was a complaint to the head teacher by the students who failed to good marks in a tough test given by the teacher.

Question Number : 82 Question Id : 7368155538 Question Type : MCQ Option Shuffling : Yes Display Question Number : Yes Single Line Question Option : No Option Orientation : Vertical

Correct : 1 Wrong : 0.25

Given below is a sentence which is to be transformed and rewritten as indicated in brackets and there are four options given. Choose the one which 'correctly' transforms the given sentence :

**The teacher gave a test. It was a tough one. Many students failed to get good marks. They complained (to the head teacher). {Combine all the four into simple sentence -do not change the focus}**

Options :

1. ✘ The teacher giving a test, that being tough, making many students failing to get good marks, the head teacher received a complaint about the test.
2. ✔ Failing to get good marks in the tough test given by the teacher, students complained to the head teacher.
3. ✘ The teacher's test being a tough one and preventing many students from getting good marks caused the students' complaint to the head teacher.
4. ✘ There was a complaint to the head teacher by the students who failed to good marks in a tough test given by the teacher.

Question Number : 83 Question Id : 7368155539 Question Type : MCQ Option Shuffling : Yes Display Question Number : Yes Single Line Question Option : No Option Orientation : Vertical

Correct : 1 Wrong : 0.25

Given below is a sentence which is to be transformed and rewritten as indicated in brackets and there are four options given. Choose the one which 'correctly' transforms the given sentence :

**Sita should have been greeted by Ram before she was taken on the 'vimana'. {remark about a Ramayana performed by students; rewrite as an active}**

Options :

1. ✘ Ram should greet Sita before taking her with him on the 'vimana'.
2. ✘ Ram should have greeted Sita before taking her on the 'vimana'.
3. ✘ Ram should have greeted Sita and then taken on the 'vimana'.
4. ✔ Ram should have greeted Sita before {they}took her on the 'vimana'

Question Number : 83 Question Id : 7368155539 Question Type : MCQ Option Shuffling : Yes Display Question Number : Yes  
Single Line Question Option : No Option Orientation : Vertical

Correct : 1 Wrong : 0.25

Given below is a sentence which is to be transformed and rewritten as indicated in brackets and there are four options given. Choose the one which 'correctly' transforms the given sentence :

Sita should have been greeted by Ram before she was taken on the 'vimana'.

{remark about a Ramayana performed by students; *rewrite as an active*}

Options :

1. ✘ Ram should greet Sita before taking her with him on the 'vimana'.
2. ✘ Ram should have greeted Sita before taking her on the 'vimana'.
3. ✘ Ram should have greeted Sita and then taken on the 'vimana'.
4. ✔ Ram should have greeted Sita before {they}took her on the 'vimana'

Question Number : 84 Question Id : 7368155540 Question Type : MCQ Option Shuffling : Yes Display Question Number : Yes  
Single Line Question Option : No Option Orientation : Vertical

Correct : 1 Wrong : 0.25

Read the sentence given below. Pay attention to the words/phrases/segments in italics. Choose the appropriate ONE WORD substitutes for the phrases and clauses italicized:

If you don't like the way I do my job, *take it up with* my manager.

Options :

1. ✘ If you don't like the way I do my job, speak to the manager.
2. ✔ If you don't like way I do my job, complain to the manager.
3. ✘ If you don't like the way I do my job, approach the manager.
4. ✘ If you don't like the way I do my job, meet the manager.

Question Number : 84 Question Id : 7368155540 Question Type : MCQ Option Shuffling : Yes Display Question Number : Yes  
Single Line Question Option : No Option Orientation : Vertical

Correct : 1 Wrong : 0.25



Read the sentence given below. Pay attention to the words/phrases/segments in italics. Choose the appropriate ONE WORD substitutes for the phrases and clauses italicized:

If you don'tlike the way I do my job, *take it up with* my manager.

Options :

1. ✘ If you don'tlike the way I do my job, speak to the manager.
2. ✔ If you don'tlike way I do my job, complain to the manager.
3. ✘ If you don'tlike the way I do my job, approach the manager.
4. ✘ If you don'tlike the way I do my job, meet the manager.

Question Number : 85 Question Id : 7368155541 Question Type : MCQ Option Shuffling : Yes Display Question Number : Yes  
Single Line Question Option : No Option Orientation : Vertical

Correct : 1 Wrong : 0.25

Read the sentence given below. Pay attention to the words/phrases/segments in italics. Choose the appropriate ONE WORD substitutes for the phrases and clauses italicized

I tried to *get my point across* to the judge but she wouldn't listen.

Options :

1. ✘ I tried communicating my point to the judge but she wouldn't listen.
2. ✘ I tried making the judge listen to the point I communicated.
3. ✔ I tried to communicate my point to the judge but she would not listen.
4. ✘ I leaned over and gave the judge my point but she refused to listen.

Question Number : 85 Question Id : 7368155541 Question Type : MCQ Option Shuffling : Yes Display Question Number : Yes  
Single Line Question Option : No Option Orientation : Vertical

Correct : 1 Wrong : 0.25

Read the sentence given below. Pay attention to the words/phrases/segments in italics. Choose the appropriate ONE WORD substitutes for the phrases and clauses italicized

I tried to *get my point across* to the judge but she wouldn'tlisten.

Options :

1. ✘ I tried communicating my point to the judge but she wouldn'tlisten.
2. ✘ I tried making the judgelisten to the point I communicated.
3. ✔ I tried to communicate my point to the judge but she would notlisten.
4. ✘ lleaned over and gave the judge my point but she refused tolisten.

Question Number : 86 Question Id : 7368155542 Question Type : MCQ Option Shuffling : Yes Display Question Number : Yes  
Single Line Question Option : No Option Orientation : Vertical

Correct : 1 Wrong : 0.25

Given below is a sentence which divided into four parts labelled a, b, c, and d. One of these parts contains an error. Choose the part that has the error:

**Magnus Carlsen / became / a chess Grandmaster / in the age of 13.**

**A B C D**

Options :

1. ✘ A
2. ✘ B
3. ✘ C
4. ✔ D

Question Number : 86 Question Id : 7368155542 Question Type : MCQ Option Shuffling : Yes Display Question Number : Yes  
Single Line Question Option : No Option Orientation : Vertical

Correct : 1 Wrong : 0.25

Given below is a sentence which divided into four partslabelled a, b, c, and d. One of these parts contains an error. Choose the part that has the error:

**Magnus Carlsen/became/a chess Grandmaster/in the age of 13.**

**A B C D**

Options :

1. ✘ A
2. ✘ B
3. ✘ C
4. ✔ D

Question Number : 87 Question Id : 7368155543 Question Type : MCQ Option Shuffling : Yes Display Question Number : Yes  
Single Line Question Option : No Option Orientation : Vertical

Correct : 1 Wrong : 0.25

Given below is a sentence which divided into four parts labelled a, b, c, and d. One of these parts contains an error. Choose the part that has the error:

**I have / never let my schooling / interfere / by my education.**

**A B C D**

Options :

1. ✘ A
2. ✘ B
3. ✘ C
4. ✔ D

Correct : 1 Wrong : 0.25

Given below is a sentence which divided into four partslabelled a, b, c, and d. One of these parts contains an error. Choose the part that has the error:

I have/neverlet my schooling/interfere/by my education.

A B C D

Options :

1. ✘ A
2. ✘ B
3. ✘ C
4. ✔ D

Correct : 1 Wrong : 0.25

Given below is a sentence which divided into four parts labelled a, b, c, and d. One of these parts contains an error. Choose the part that has the error:

The mind is not / a vessel to be filled, / but a fire / to be kindle.

A B C D

Options :

1. ✘ A
2. ✘ B
3. ✘ C
4. ✔ D

Correct : 1 Wrong : 0.25

Given below is a sentence which divided into four partslabelled a, b, c, and d. One of these parts contains an error. Choose the part that has the error:

The mind is not/a vessel to be filled,/but a fire/to be kindle.

A B C D

Options :

1. ✘ A
2. ✘ B
3. ✘ C

4. ✓ D

Question Number : 89 Question Id : 7368155545 Question Type : MCQ Option Shuffling : Yes Display Question Number : Yes  
Single Line Question Option : No Option Orientation : Vertical

Correct : 1 Wrong : 0.25

Fill in the blanks with the correct form of idioms /proverbs by choosing the correct option given.

By claiming his invention as his own, John \_\_\_\_\_ Dick's \_\_\_\_\_.

Options :

1. ✗ snip; boom
2. ✗ pinched; clap
3. ✓ stole; thunder
4. ✗ lifted; thunder

Question Number : 89 Question Id : 7368155545 Question Type : MCQ Option Shuffling : Yes Display Question Number : Yes  
Single Line Question Option : No Option Orientation : Vertical

Correct : 1 Wrong : 0.25

Fill in the blanks with the correct form of idioms /proverbs by choosing the correct option given.

By claiming his invention as his own, John \_\_\_\_\_ Dick's \_\_\_\_\_.

Options :

1. ✗ snip; boom
2. ✗ pinched; clap
3. ✓ stole; thunder
4. ✗ lifted; thunder

Question Number : 90 Question Id : 7368155546 Question Type : MCQ Option Shuffling : Yes Display Question Number : Yes  
Single Line Question Option : No Option Orientation : Vertical

Correct : 1 Wrong : 0.25

Fill in the blanks with the correct form of idioms /proverbs by choosing the correct option given.

Let's \_\_\_\_\_ the \_\_\_\_\_ when we \_\_\_\_\_ to it.

Options :

1. ✗ pass; bridge; come
2. ✓ cross; bridge; come
3. ✗ paint; wall; walk
4. ✗ cross; bridge; wall

Question Number : 90 Question Id : 7368155546 Question Type : MCQ Option Shuffling : Yes Display Question Number : Yes  
Single Line Question Option : No Option Orientation : Vertical

Correct : 1 Wrong : 0.25

Fill in the blanks with the correct form of idioms /proverbs by choosing the correct option given.

Let's \_\_\_\_\_ the \_\_\_\_\_ when we \_\_\_\_\_ to it.

Options :

1. ✘ pass; bridge; come
2. ✔ cross; bridge; come
3. ✘ paint; wall; walk
4. ✘ cross; bridge; walk

Question Number : 91 Question Id : 7368155547 Question Type : MCQ Option Shuffling : Yes Display Question Number : Yes  
Single Line Question Option : No Option Orientation : Vertical

Correct : 1 Wrong : 0.25

Complete the sentence below by choosing one related pair of words that will fill in the blanks:

Be not a \_\_\_\_\_ if your head is made of \_\_\_\_\_.

Options :

1. ✘ baker; bread
2. ✘ baker; eggs
3. ✔ baker; butter
4. ✘ barber; blades

Question Number : 91 Question Id : 7368155547 Question Type : MCQ Option Shuffling : Yes Display Question Number : Yes  
Single Line Question Option : No Option Orientation : Vertical

Correct : 1 Wrong : 0.25

Complete the sentence below by choosing one related pair of words that will fill in the blanks:

Be not a \_\_\_\_\_ if your head is made of \_\_\_\_\_.

Options :

1. ✘ baker; bread
2. ✘ baker; eggs
3. ✔ baker; butter
4. ✘ barber; blades

Question Number : 92 Question Id : 7368155548 Question Type : MCQ Option Shuffling : Yes Display Question Number : Yes  
Single Line Question Option : No Option Orientation : Vertical

Correct : 1 Wrong : 0.25

Complete the sentence below by choosing one related pair of words that will fill in the blanks:

A handsome \_\_\_\_\_ often pinches the \_\_\_\_\_.

Options :

1. ✘ woman; purse
2. ✔ shoe; foot
3. ✘ boy; girl
4. ✘ prince; girl

Question Number : 92 Question Id : 7368155548 Question Type : MCQ Option Shuffling : Yes Display Question Number : Yes  
Single Line Question Option : No Option Orientation : Vertical

Correct : 1 Wrong : 0.25

Complete the sentence below by choosing one related pair of words that will fill in the blanks:

A handsome \_\_\_\_\_ often pinches the \_\_\_\_\_.

Options :

1. ✘ woman; purse
2. ✔ shoe; foot
3. ✘ boy; girl
4. ✘ prince; girl

Question Number : 93 Question Id : 7368155549 Question Type : MCQ Option Shuffling : Yes Display Question Number : Yes  
Single Line Question Option : No Option Orientation : Vertical

Correct : 1 Wrong : 0.25

A key word is given below. Choose the word closest to it in its meaning {synonym}. Pay attention to how the word would be used to, if required:

*Heavy*

Options :

1. ✔ Burdensome
2. ✘ Gloomy
3. ✘ Serious
4. ✘ Difficult

Question Number : 93 Question Id : 7368155549 Question Type : MCQ Option Shuffling : Yes Display Question Number : Yes  
Single Line Question Option : No Option Orientation : Vertical

Correct : 1 Wrong : 0.25

A key word is given below. Choose the word closest to it in its meaning {synonym}. Pay attention to how the word would be used to, if required:

### *Heavy*

Options :

1. ✓ Burdensome
2. ✗ Gloomy
3. ✗ Serious
4. ✗ Difficult

Question Number : 94 Question Id : 7368155550 Question Type : MCQ Option Shuffling : Yes Display Question Number : Yes  
Single Line Question Option : No Option Orientation : Vertical

Correct : 1 Wrong : 0.25

A key word is given below. Choose the word closest to it in its meaning {synonym}. Pay attention to how the word would be used to, if required:

### *Imitate*

Options :

1. ✗ Forge
2. ✗ Burlesque
3. ✗ Mock
4. ✓ Copy

Question Number : 94 Question Id : 7368155550 Question Type : MCQ Option Shuffling : Yes Display Question Number : Yes  
Single Line Question Option : No Option Orientation : Vertical

Correct : 1 Wrong : 0.25

A key word is given below. Choose the word closest to it in its meaning {synonym}. Pay attention to how the word would be used to, if required:

### *Imitate*

Options :

1. ✗ Forge
2. ✗ Burlesque
3. ✗ Mock
4. ✓ Copy

Question Number : 95 Question Id : 7368155551 Question Type : MCQ Option Shuffling : Yes Display Question Number : Yes  
Single Line Question Option : No Option Orientation : Vertical

Correct : 1 Wrong : 0.25

A key word is given below. Choose the word closest to it in its meaning {synonym}. Pay attention to how the word would be used to, if required:

*Protect (Verb)*

Options :

1. ✓ Guard
2. ✗ Keep
3. ✗ Hoard
4. ✗ Covered

Question Number : 95 Question Id : 7368155551 Question Type : MCQ Option Shuffling : Yes Display Question Number : Yes  
Single Line Question Option : No Option Orientation : Vertical

Correct : 1 Wrong : 0.25

A key word is given below. Choose the word closest to it in its meaning {synonym}. Pay attention to how the word would be used to, if required:

*Protect (Verb)*

Options :

1. ✓ Guard
2. ✗ Keep
3. ✗ Hoard
4. ✗ Covered

Question Number : 96 Question Id : 7368155552 Question Type : MCQ Option Shuffling : Yes Display Question Number : Yes  
Single Line Question Option : No Option Orientation : Vertical

Correct : 1 Wrong : 0.25

A key word is given below. Choose the word which indicates the contradictory or opposite meaning {antonym} of the key word:

*Acute*

Options :

1. ✗ Dull
2. ✗ Stupid
3. ✗ Unintelligent
4. ✓ Thick

Question Number : 96 Question Id : 7368155552 Question Type : MCQ Option Shuffling : Yes Display Question Number : Yes  
Single Line Question Option : No Option Orientation : Vertical

Correct : 1 Wrong : 0.25



A key word is given below. Choose the word which indicates the contradictory or opposite meaning {antonym} of the key word:

***Acute***

Options :

1. ✘ Dull
2. ✘ Stupid
3. ✘ Unintelligent
4. ✔ Thick

Question Number : 97 Question Id : 7368155553 Question Type : MCQ Option Shuffling : Yes Display Question Number : Yes  
Single Line Question Option : No Option Orientation : Vertical

Correct : 1 Wrong : 0.25

A key word is given below. Choose the word which indicates the contradictory or opposite meaning {antonym} of the key word:

***Sacred***

Options :

1. ✔ Profane
2. ✘ Irreligious
3. ✘ Earthly
4. ✘ Lay

Question Number : 97 Question Id : 7368155553 Question Type : MCQ Option Shuffling : Yes Display Question Number : Yes  
Single Line Question Option : No Option Orientation : Vertical

Correct : 1 Wrong : 0.25

A key word is given below. Choose the word which indicates the contradictory or opposite meaning {antonym} of the key word:

***Sacred***

Options :

1. ✔ Profane
2. ✘ Irreligious
3. ✘ Earthly
4. ✘ Lay

Question Number : 98 Question Id : 7368155554 Question Type : MCQ Option Shuffling : Yes Display Question Number : Yes  
Single Line Question Option : No Option Orientation : Vertical

Correct : 1 Wrong : 0.25

Given below is a set of four words. One of the four words is spelled wrongly. Choose the word that has been spelled correctly.

Options :

1. ✘ knowledgeable
2. ✘ respectable
3. ✔ acceptable
4. ✘ perceptible

Question Number : 98 Question Id : 7368155554 Question Type : MCQ Option Shuffling : Yes Display Question Number : Yes  
Single Line Question Option : No Option Orientation : Vertical

Correct : 1 Wrong : 0.25

Given below is a set of four words. One of the four words is spelled wrongly. Choose the word that has been spelled wrongly.

Options :

1. ✘ knowledgeable
2. ✘ respectable
3. ✔ acceptable
4. ✘ perceptible

Question Number : 99 Question Id : 7368155555 Question Type : MCQ Option Shuffling : Yes Display Question Number : Yes  
Single Line Question Option : No Option Orientation : Vertical

Correct : 1 Wrong : 0.25

Given below is a set of four words. One of the four words is spelled wrongly. Choose the word that has been spelled wrongly.

Options :

1. ✘ colleague
2. ✔ leegue
3. ✘ plague
4. ✘ vague

Question Number : 99 Question Id : 7368155555 Question Type : MCQ Option Shuffling : Yes Display Question Number : Yes  
Single Line Question Option : No Option Orientation : Vertical

Correct : 1 Wrong : 0.25

Given below is a set of four words. One of the four words is spelled wrongly. Choose the word that has been spelled wrongly.

Options :

1. ✘ colleague
2. ✔ leegue
3. ✘ plague
4. ✘ vague

Question Number : 100 Question Id : 7368155556 Question Type : MCQ Option Shuffling : Yes Display Question Number : Yes  
Single Line Question Option : No Option Orientation : Vertical

Correct : 1 Wrong : 0.25

Given below is a set of four words. Choose the word with the correct spelling:

Options :

1. ✘ irupt
2. ✔ interrupt
3. ✘ nanocorrupt
4. ✘ uncorupt

Question Number : 100 Question Id : 7368155556 Question Type : MCQ Option Shuffling : Yes Display Question Number : Yes  
Single Line Question Option : No Option Orientation : Vertical

Correct : 1 Wrong : 0.25

Given below is a set of four words. Choose the word with the correct spelling:

Options :

1. ✘ irupt
2. ✔ interrupt
3. ✘ nanocorrupt
4. ✘ uncorupt

### General Intelligence

Section Id :	736815109
Section Number :	3
Section type :	Online
Mandatory or Optional:	Mandatory
Number of Questions:	50
Number of Questions to be attempted:	50
Section Marks:	50
Display Number Panel:	Yes
Group All Questions:	No

Sub-Section Number:	1
Sub-Section Id:	736815165
Question Shuffling Allowed :	Yes

Question Number : 101 Question Id : 7368155557 Question Type : MCQ Option Shuffling : Yes Display Question Number : Yes  
Single Line Question Option : No Option Orientation : Vertical

Correct : 1 Wrong : 0.25

Before 5 years the ratio of the ages of a father and a daughter was 5:2. After 10 years the ratio will be 7:3. What will be the ratio of their present ages?

Options :

1. ✔ 16:5

2. ✘ 19:7

3. ✘ 6:5

4. ✘ 9:3

Note: For this question, discrepancy is found in question/answer. Full Marks is being awarded to all candidates.

Question Number : 101 Question Id : 7368155557 Question Type : MCQ Option Shuffling : Yes Display Question Number : Yes  
Single Line Question Option : No Option Orientation : Vertical

Correct : 1 Wrong : 0.25

5 साल पहले एक पिता और उसकी बेटी की आयु का अनुपात 5:2 था। 10 साल बाद यह अनुपात 7:3 हो जायेगा। वर्तमान में उनकी आयु का अनुपात कितना होगा?

Options :

1. ✔ 16:5

2. ✘ 19:7

3. ✘ 6:5

4. ✘ 9:3

Note: For this question, discrepancy is found in question/answer. Full Marks is being awarded to all candidates.

Question Number : 102 Question Id : 7368155558 Question Type : MCQ Option Shuffling : Yes Display Question Number : Yes  
Single Line Question Option : No Option Orientation : Vertical

Correct : 1 Wrong : 0.25

Seema and Reeta can do a work in 10 and 15 days respectively. In how many days they together will do the same work?

Options :

1. ✘ 4 days

2. ✔ 6 days

3. ✘ 7 days

4. ✘ 12 days

Question Number : 102 Question Id : 7368155558 Question Type : MCQ Option Shuffling : Yes Display Question Number : Yes  
Single Line Question Option : No Option Orientation : Vertical

Correct : 1 Wrong : 0.25

सीमा और रीटा एक कार्य को क्रमशः 10 और 15 दिनों में पूरा करते हैं। वे दोनों एक साथ मिलकर उस कार्य को कितने दिनों में पूरा करेंगे?

Options :

1. ✘ 4 दिन

2. ✔ 6 दिन

3. ✘ 7 दिन

4. ✘ 12 दिन

Question Number : 103 Question  
Single Line Question Option : N

Latest Sarkari Jobs, Govt Exam Results,  
Vacancies and updates on one click

Know More

play Question Number : Yes

Correct : 1 Wrong : 0.25

The LCM of two numbers is 288 and their HCF 48. If one number is 96 then find the other

Options :

1. ✘ 288
2. ✘ 48
3. ✔ 144
4. ✘ 94

Question Number : 103 Question Id : 7368155559 Question Type : MCQ Option Shuffling : Yes Display Question Number : Yes  
Single Line Question Option : No Option Orientation : Vertical

Correct : 1 Wrong : 0.25

दो संख्याओं का लघुत्तम समापवर्त्य (LCM) 288 है, और महत्तम समापवर्त्य (HCF) 48 है, यदि एक संख्या 96 है, तो दूसरी संख्या कौन सी होगी?

Options :

1. ✘ 288
2. ✘ 48
3. ✔ 144
4. ✘ 94

Question Number : 104 Question Id : 7368155560 Question Type : MCQ Option Shuffling : Yes Display Question Number : Yes  
Single Line Question Option : No Option Orientation : Vertical

Correct : 1 Wrong : 0.25

The difference between a number and its four-fifth is 48. What is the number?

Options :

1. ✘ 100
2. ✘ 256
3. ✔ 240
4. ✘ 123

Question Number : 104 Question Id : 7368155560 Question Type : MCQ Option Shuffling : Yes Display Question Number : Yes  
Single Line Question Option : No Option Orientation : Vertical

Correct : 1 Wrong : 0.25

एक संख्या और उसके  $\frac{4}{5}$  भाग का अंतर 48 है। तो वह संख्या कौन सी होगी?

Options :

1. ✘ 100
2. ✘ 256
3. ✔ 240
4. ✘ 123

Question Number : 105 Question Id : 7368155561 Question Type : MCQ Option Shuffling : Yes Display Question Number : Yes  
Single Line Question Option : No Option Orientation : Vertical

Correct : 1 Wrong : 0.25

If speed of a boat in still water is 3 kmph and speed of the stream is 4 kmph then what will be the speed at downstream?

Options :

1. ✓ 7 kmph
2. ✗ 1 kmph
3. ✗ 12 kmph
4. ✗ 1.5 kmph

Question Number : 105 Question Id : 7368155561 Question Type : MCQ Option Shuffling : Yes Display Question Number : Yes Single Line Question Option : No Option Orientation : Vertical

Correct : 1 Wrong : 0.25

यदि स्थिर पानी में एक नाव की गति 3 कि.मी./घंटा है, और धारा की गति 4 कि.मी./घंटा है, तो धारा की दिशा में नाव की गति क्या होगी?

Options :

1. ✓ 7 कि.मी./घंटा
2. ✗ 1 कि.मी./घंटा
3. ✗ 12 कि.मी./घंटा
4. ✗ 1.5 कि.मी./घंटा

Question Number : 106 Question Id : 7368155562 Question Type : MCQ Option Shuffling : Yes Display Question Number : Yes Single Line Question Option : No Option Orientation : Vertical

Correct : 1 Wrong : 0.25

What will be the next figure of the sequence?



Options :

1. ✗ A
2. ✓ B
3. ✗ C
4. ✗ D

Question Number : 106 Question Id : 7368155562 Question Type : MCQ Option Shuffling : Yes Display Question Number : Yes Single Line Question Option : No Option Orientation : Vertical

Correct : 1 Wrong : 0.25

अनुक्रम में अगला चित्र कौन सा होगा?



Options :


1. ✗ A

- 2. ✓ B
- 3. ✗ C
- 4. ✗ D

Question Number : 107 Question Id : 7368155563 Question Type : MCQ Option Shuffling : Yes Display Question Number : Yes  
Single Line Question Option : No Option Orientation : Vertical

Correct : 1 Wrong : 0.25

What will be the next figure of the sequence?



Options :

- 1. ✗ A
- 2. ✗ B
- 3. ✓ C
- 4. ✗ D

Question Number : 107 Question Id : 7368155563 Question Type : MCQ Option Shuffling : Yes Display Question Number : Yes  
Single Line Question Option : No Option Orientation : Vertical

Correct : 1 Wrong : 0.25

अनुक्रम में अगला चित्र कौन सा होगा?



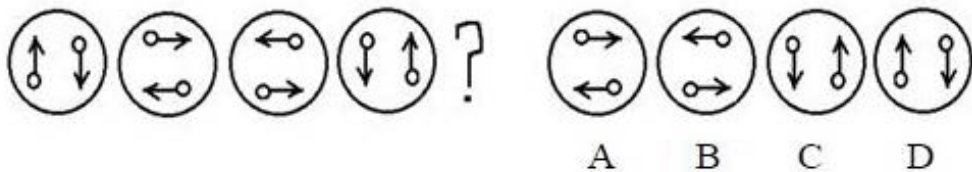
Options :

- 1. ✗ A
- 2. ✗ B
- 3. ✓ C
- 4. ✗ D

Question Number : 108 Question Id : 7368155564 Question Type : MCQ Option Shuffling : Yes Display Question Number : Yes  
Single Line Question Option : No Option Orientation : Vertical

Correct : 1 Wrong : 0.25

What will be the next figure of the sequence?



Options :

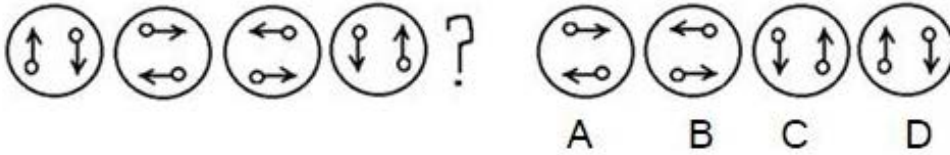
- 1. ✗ A
- 2. ✗ B

- 3. ✘ C
- 4. ✔ D

Question Number : 108 Question Id : 7368155564 Question Type : MCQ Option Shuffling : Yes Display Question Number : Yes  
Single Line Question Option : No Option Orientation : Vertical

Correct : 1 Wrong : 0.25

अनुक्रम में अगला चित्र कौन सा होगा?



Options :

- 1. ✘ A
- 2. ✘ B
- 3. ✘ C
- 4. ✔ D

Question Number : 109 Question Id : 7368155565 Question Type : MCQ Option Shuffling : Yes Display Question Number : Yes  
Single Line Question Option : No Option Orientation : Vertical

Correct : 1 Wrong : 0.25

What will be the next figure of the sequence?



Options :

- 1. ✔ A
- 2. ✘ B
- 3. ✘ C
- 4. ✘ D

Question Number : 109 Question Id : 7368155565 Question Type : MCQ Option Shuffling : Yes Display Question Number : Yes  
Single Line Question Option : No Option Orientation : Vertical

Correct : 1 Wrong : 0.25

अनुक्रम में अगला चित्र कौन सा होगा?



Options :

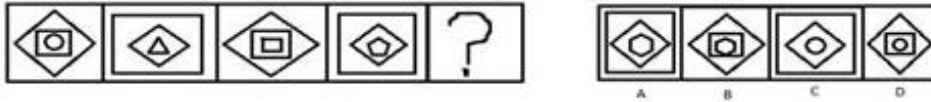
- 1. ✔ A
- 2. ✘ B
- 3. ✘ C
- 4. ✘ D



Question Number : 110 Question Id : 7368155566 Question Type : MCQ Option Shuffling : Yes Display Question Number : Yes  
Single Line Question Option : No Option Orientation : Vertical

Correct : 1 Wrong : 0.25

What will be the next figure of the sequence?



Options :

- ✘ A
- ✔ B
- ✘ C
- ✘ D

Question Number : 110 Question Id : 7368155566 Question Type : MCQ Option Shuffling : Yes Display Question Number : Yes  
Single Line Question Option : No Option Orientation : Vertical

Correct : 1 Wrong : 0.25

अनुक्रम में अगला चित्र कौन सा होगा?



Options :

- ✘ A
- ✔ B
- ✘ C
- ✘ D

Question Number : 111 Question Id : 7368155567 Question Type : MCQ Option Shuffling : Yes Display Question Number : Yes  
Single Line Question Option : No Option Orientation : Vertical

Correct : 1 Wrong : 0.25

If P denotes  $>$ , Q denotes  $<$ , R denotes  $=$ , A denotes  $+$  and B denotes  $-$ , then which one of the following is not true?

Options :

- ✔ 120 A 18 P 140 B 57
- ✘ 119 B 18 Q 240
- ✘ 54 A 20 P 40 B 4
- ✘ 112 A 30 Q 540

Note: For this question, discrepancy is found in question/answer. Full Marks is being awarded to all candidates.

Question Number : 111 Question Id : 7368155567 Question Type : MCQ Option Shuffling : Yes Display Question Number : Yes  
Single Line Question Option : No Option Orientation : Vertical

Correct : 1 Wrong : 0.25

यदि P को > से दर्शाया जाता है, Q को < से दर्शाया जाता है, R को = से दर्शाया जाता है, A को + से दर्शाया जाता है और B को - से दर्शाया जाता है, तो निम्नलिखित में से कौन सा सत्य नहीं है?

Options :

1. ✓ 120 A 18 P 140 B 57
2. ✗ 119 B 18 Q 240
3. ✗ 54 A 20 P 40 B 4
4. ✗ 112 A 30 Q 540

Note: For this question, discrepancy is found in question/answer. Full Marks is being awarded to all candidates.

Question Number : 112 Question Id : 7368155568 Question Type : MCQ Option Shuffling : Yes Display Question Number : Yes Single Line Question Option : No Option Orientation : Vertical

Correct : 1 Wrong : 0.25

If car is called ball, ball is called bat, bat is called filter and filter is called butter then which one of the following can be used to purify water?

Options :

1. ✗ Car
2. ✓ Butter
3. ✗ Filter
4. ✗ Bat

Question Number : 112 Question Id : 7368155568 Question Type : MCQ Option Shuffling : Yes Display Question Number : Yes Single Line Question Option : No Option Orientation : Vertical

Correct : 1 Wrong : 0.25

यदि कार को गेंद कहा जाए, गेंद को बल्ला कहा जाए, बल्ले को फिल्टर कहा जाए और फिल्टर को मक्खन कहा जाए, तो निम्नलिखित में से पानी के शुद्धिकरण में किसका इस्तेमाल किया जायेगा?

Options :

1. ✗ कार
2. ✓ मक्खन
3. ✗ फिल्टर
4. ✗ बल्ला

Question Number : 113 Question Id : 7368155569 Question Type : MCQ Option Shuffling : Yes Display Question Number : Yes Single Line Question Option : No Option Orientation : Vertical

Correct : 1 Wrong : 0.25

A cube is painted red on all faces is cut into 8 small cubes of equal sizes. How many cubes are not painted on any face?

Options :

1. ✗ 1
2. ✗ 2
3. ✗ 8

4. ✓ 0

Question Number : 113 Question Id : 7368155569 Question Type : MCQ Option Shuffling : Yes Display Question Number : Yes  
Single Line Question Option : No Option Orientation : Vertical

Correct : 1 Wrong : 0.25

सभी तरफ से लाल रंग से चित्रांकित किये गए एक घन को समान आकार के 8 घनों में विभाजित किया गया है, तो कितने घन किसी भी ओर से चित्रांकित नहीं हैं?

Options :

1. ✗ 1
2. ✗ 2
3. ✗ 8
4. ✓ 0

Question Number : 114 Question Id : 7368155570 Question Type : MCQ Option Shuffling : Yes Display Question Number : Yes  
Single Line Question Option : No Option Orientation : Vertical

Correct : 1 Wrong : 0.25

In a language FIRE is written as EKQG then PEOPLE will be written as

Options :

1. ✓ QGNRKG
2. ✗ REWTYL
3. ✗ YTHKLY
4. ✗ RREDFT

Question Number : 114 Question Id : 7368155570 Question Type : MCQ Option Shuffling : Yes Display Question Number : Yes  
Single Line Question Option : No Option Orientation : Vertical

Correct : 1 Wrong : 0.25

किसी विशिष्ट भाषा में, FIRE को EKQG लिखा जाता है, तो PEOPLE को किस प्रकार से लिखा जायेगा?

Options :

1. ✓ QGNRKG
2. ✗ REWTYL
3. ✗ YTHKLY
4. ✗ RREDFT

Question Number : 115 Question Id : 7368155571 Question Type : MCQ Option Shuffling : Yes Display Question Number : Yes  
Single Line Question Option : No Option Orientation : Vertical

Correct : 1 Wrong : 0.25

In a language LEMON is written as MDNNO then ONION will be written as

Options :

1. ✗ QGNRK
2. ✗ REWTY
3. ✓ PMJNO

4. ✘ RREDF

Question Number : 115 Question Id : 7368155571 Question Type : MCQ Option Shuffling : Yes Display Question Number : Yes  
Single Line Question Option : No Option Orientation : Vertical

Correct : 1 Wrong : 0.25

किसी विशिष्ट भाषा में, IEMON को MDNNO लिखा जाता है, तो ONION को किस प्रकार से लिखा जायेगा?

Options :

1. ✘ QGNRK

2. ✘ REWTY

3. ✔ PMJNO

4. ✘ RREDF

Question Number : 116 Question Id : 7368155572 Question Type : MCQ Option Shuffling : Yes Display Question Number : Yes  
Single Line Question Option : No Option Orientation : Vertical

Correct : 1 Wrong : 0.25

Find the next term of the series.

114, 152, 110, 148, 106, \_\_\_\_\_

Options :

1. ✘ 245

2. ✔ 144

3. ✘ 145

4. ✘ 225

Question Number : 116 Question Id : 7368155572 Question Type : MCQ Option Shuffling : Yes Display Question Number : Yes  
Single Line Question Option : No Option Orientation : Vertical

Correct : 1 Wrong : 0.25

114, 152, 110, 148, 106, \_\_\_\_\_

इस श्रेणी का अगला पद ज्ञात करें।

Options :

1. ✘ 245

2. ✔ 144

3. ✘ 145

4. ✘ 225

Question Number : 117 Question Id : 7368155573 Question Type : MCQ Option Shuffling : Yes Display Question Number : Yes  
Single Line Question Option : No Option Orientation : Vertical

Correct : 1 Wrong : 0.25

Find the next term of the series.

1, 0.250, 0.111, 0.0625, \_\_\_\_\_

Options :

1. ✔ 0.040

2. ✘ 0.124

3. ✘ 0.225

4. ✘ 0.005

Question Number : 117 Question Id : 7368155573 Question Type : MCQ Option Shuffling : Yes Display Question Number : Yes  
Single Line Question Option : No Option Orientation : Vertical

Correct : 1 Wrong : 0.25

1, 0.250, 0.111, 0.0625, \_\_\_\_\_

इस श्रेणी का अगला पद ज्ञात करें।

Options :

1. ✔ 0.040

2. ✘ 0.124

3. ✘ 0.225

4. ✘ 0.005

Question Number : 118 Question Id : 7368155574 Question Type : MCQ Option Shuffling : Yes Display Question Number : Yes  
Single Line Question Option : No Option Orientation : Vertical

Correct : 1 Wrong : 0.25

Find the next term of the series.

1,10,90,720,5040,\_\_\_\_\_

Options :

1. ✘ 1000

2. ✘ 10240

3. ✔ 30240

4. ✘ 24400

Question Number : 118 Question Id : 7368155574 Question Type : MCQ Option Shuffling : Yes Display Question Number : Yes  
Single Line Question Option : No Option Orientation : Vertical

Correct : 1 Wrong : 0.25

1, 10, 90, 720, 5040, \_\_\_\_\_

इस श्रेणी का अगला पद ज्ञात करें।

Options :

1. ✘ 1000

2. ✘ 10240

3. ✔ 30240

4. ✘ 24400

Question Number : 119 Question Id : 7368155575 Question Type : MCQ Option Shuffling : Yes Display Question Number : Yes  
Single Line Question Option : No Option Orientation : Vertical

Correct : 1 Wrong : 0.25

Find the next term of the series.

1,1,4,8,9,27,16,\_\_\_\_\_

Options :

1. ✘ 34

2. ✘ 32  
3. ✘ 56  
4. ✔ 64

Question Number : 119 Question Id : 7368155575 Question Type : MCQ Option Shuffling : Yes Display Question Number : Yes  
Single Line Question Option : No Option Orientation : Vertical

Correct : 1 Wrong : 0.25

1, 1, 4, 8, 9, 27, 16, \_\_\_\_\_

इस श्रेणी का अगला पद ज्ञात करें।

Options :

1. ✘ 34  
2. ✘ 32  
3. ✘ 56  
4. ✔ 64

Question Number : 120 Question Id : 7368155576 Question Type : MCQ Option Shuffling : Yes Display Question Number : Yes  
Single Line Question Option : No Option Orientation : Vertical

Correct : 1 Wrong : 0.25

Find the next term of the series.

25, 225, 625, 1225, \_\_\_\_\_

Options :

1. ✘ 2225  
2. ✔ 2025  
3. ✘ 2125  
4. ✘ 1335

Question Number : 120 Question Id : 7368155576 Question Type : MCQ Option Shuffling : Yes Display Question Number : Yes  
Single Line Question Option : No Option Orientation : Vertical

Correct : 1 Wrong : 0.25

25, 225, 625, 1225, \_\_\_\_\_

इस श्रेणी का अगला पद ज्ञात करें।

Options :

1. ✘ 2225  
2. ✔ 2025  
3. ✘ 2125  
4. ✘ 1335

Question Number : 121 Question Id : 7368155577 Question Type : MCQ Option Shuffling : Yes Display Question Number : Yes  
Single Line Question Option : No Option Orientation : Vertical

Correct : 1 Wrong : 0.25

Find the value of y.

$$1.3^2 \times 1.3^9 / 1.3^7 \times 1.3^6 = y$$

Options :

Latest Sarkari Jobs, Govt Exam Results,  
Vacancies and updates on one click

Know More

1. ✘ 45.34
2. ✘ 342.11
3. ✘ 123.90
4. ✔ 13.785

Question Number : 121 Question Id : 7368155577 Question Type : MCQ Option Shuffling : Yes Display Question Number : Yes  
Single Line Question Option : No Option Orientation : Vertical

Correct : 1 Wrong : 0.25

$$1.3^2 \times 1.3^9 / 1.3^7 \times 1.3^6 = y$$

'y' का मान ज्ञात करें।

Options :

1. ✘ 45.34
2. ✘ 342.11
3. ✘ 123.90
4. ✔ 13.785

Question Number : 122 Question Id : 7368155578 Question Type : MCQ Option Shuffling : Yes Display Question Number : Yes  
Single Line Question Option : No Option Orientation : Vertical

Correct : 1 Wrong : 0.25

Find the value of z.

$$112.4 + 345.23 + 109.4 + 7 - 889 + z = 1234 + 987.4 - 765.8$$

Options :

1. ✔ 1784.57
2. ✘ 56.90
3. ✘ 4456.33
4. ✘ 789.45

Note: For this question, discrepancy is found in question/answer. Full Marks is being awarded to all candidates.

Question Number : 122 Question Id : 7368155578 Question Type : MCQ Option Shuffling : Yes Display Question Number : Yes  
Single Line Question Option : No Option Orientation : Vertical

Correct : 1 Wrong : 0.25

$$112.4 + 345.23 + 109.4 + 7 - 889 + z = 1234 + 987.4 - 765.8$$

'z' का मान ज्ञात करें।

Options :

1. ✔ 1784.57
2. ✘ 56.90
3. ✘ 4456.33
4. ✘ 789.45

Note: For this question, discrepancy is found in question/answer. Full Marks is being awarded to all candidates.

Question Number : 123 Question Id : 7368155579 Question Type : MCQ Option Shuffling : Yes Display Question Number : Yes  
Single Line Question Option : No Option Orientation : Vertical

Correct : 1 Wrong : 0.25

Compute the following

$$110^{-6}+3\times 10^{-9}-1\times 10^{-3}$$

Options :

1. ✘  $-0.87\times 10^{-3}$
2. ✔  $-9.98\times 10^{-4}$
3. ✘  $6.78\times 10^{-4}$
4. ✘  $89.98\times 10^{-3}$

Question Number : 123 Question Id : 7368155579 Question Type : MCQ Option Shuffling : Yes Display Question Number : Yes  
Single Line Question Option : No Option Orientation : Vertical

Correct : 1 Wrong : 0.25

निम्नलिखित की गणना कीजिये :

$$1\times 10^{-6}+3\times 10^{-9}-1\times 10^{-3}$$

Options :

1. ✘  $-0.87\times 10^{-3}$
2. ✔  $-9.98\times 10^{-4}$
3. ✘  $6.78\times 10^{-4}$
4. ✘  $89.98\times 10^{-3}$

Question Number : 124 Question Id : 7368155580 Question Type : MCQ Option Shuffling : Yes Display Question Number : Yes  
Single Line Question Option : No Option Orientation : Vertical

Correct : 1 Wrong : 0.25

Find the value of P?

$$(1010)^3-(99)^3=P$$

Options :

1. ✘ 5675532987
2. ✔ 1029330701
3. ✘ 120987356
4. ✘ 786534222

Question Number : 124 Question Id : 7368155580 Question Type : MCQ Option Shuffling : Yes Display Question Number : Yes  
Single Line Question Option : No Option Orientation : Vertical

Correct : 1 Wrong : 0.25

$$(1010)^3-(99)^3=P$$

'P' का मान ज्ञात करें।

Options :

1. ✘ 5675532987
2. ✔ 1029330701
3. ✘ 120987356
4. ✘ 786534222

Question Number : 125 Question  
Single Line Question Option : No

Latest Sarkari Jobs, Govt Exam Results,  
Vacancies and updates on one click

Know More

Display Question Number : Yes



Correct : 1 Wrong : 0.25

Five boys are sitting in a row for a group photograph. Shubham is left of Manav and right to Rishi. Ritesh is sitting right to Manav. Paras is between Manav and Ritesh. Who is sitting immediate right to Paras?

Options :

1. ✘ Rishi
2. ✘ Shubham
3. ✘ Manav
4. ✔ Ritesh

Question Number : 125 Question Id : 7368155581 Question Type : MCQ Option Shuffling : Yes Display Question Number : Yes  
Single Line Question Option : No Option Orientation : Vertical

Correct : 1 Wrong : 0.25

एक सामूहिक तस्वीर खिंचवाने के लिए पांच लड़के एक कतार में बैठे हुए हैं। मानव के बाएँ तरफ और ऋषि के दाहिने तरफ शुभम बैठा है। मानव के दाहिने तरफ रितेश बैठा हुआ है, मानव और रितेश के बीच में पारस बैठा हुआ है। पारस के ठीक दाहिने तरफ बाजू में कौन बैठा हुआ है?

Options :

1. ✘ ऋषि
2. ✘ शुभम
3. ✘ मानव
4. ✔ रितेश

Question Number : 126 Question Id : 7368155582 Question Type : MCQ Option Shuffling : Yes Display Question Number : Yes  
Single Line Question Option : No Option Orientation : Vertical

Correct : 1 Wrong : 0.25

The Principal of the Boys college banned the social networking sites in the college campus. What might be a possible cause for such a decision

Options :

1. ✘ Excessive popularity of Facebook
2. ✘ Teachers hate the college boys
3. ✔ Growth in Social Attacks Incidents
4. ✘ Broadband speed is not good

Question Number : 126 Question Id : 7368155582 Question Type : MCQ Option Shuffling : Yes Display Question Number : Yes  
Single Line Question Option : No Option Orientation : Vertical

Correct : 1 Wrong : 0.25

लड़कों के एक महाविद्यालय के प्राचार्य ने महाविद्यालय के परिसर में सोशल नेटवर्किंग साइटों को चलाने पर पाबंदी लगा दी है। इस फैसले का मूल रूप से क्या कारण हो सकता है?

Options :

Latest Sarkari Jobs, Govt Exam Results,  
Vacancies and updates on one click

Know More

1. ✘ फेसबुक की बेहद लोकप्रियता
2. ✘ शिक्षक कॉलेज के छात्रों की घृणा करते हैं
3. ✔ सामाजिक हमलों की घटनाओं में वृद्धि
4. ✘ ब्रॉडबैंड स्पीड अच्छी नहीं है

Question Number : 127 Question Id : 7368155583 Question Type : MCQ Option Shuffling : Yes Display Question Number : Yes  
Single Line Question Option : No Option Orientation : Vertical

Correct : 1 Wrong : 0.25

The SDM gave the order of banning loudspeakers in Elections during exams. He might have taken such a decision because

Options :

1. ✘ He personally feels that loudspeakers are very loud
2. ✔ It affects the study of students
3. ✘ It causes air pollution
4. ✘ It cause sound pollution

Question Number : 127 Question Id : 7368155583 Question Type : MCQ Option Shuffling : Yes Display Question Number : Yes  
Single Line Question Option : No Option Orientation : Vertical

Correct : 1 Wrong : 0.25

एस.डी.एम. ने परीक्षाओं के दौरान होने वाले चुनावों में प्रयोग किये जाने वाले लाउडस्पीकर पर रोक लगाने के निर्देश जारी किये हैं। उन्होंने यह फैसला लिया क्योंकि \_\_\_\_\_ ।

Options :

1. ✘ उन्हें स्वयं यह महसूस होता है कि लाउडस्पीकर की ध्वनि बहुत तेज़ होती है
2. ✔ छात्रों की पढ़ाई पर इसका असर होता है
3. ✘ इसकी वजह से वायु प्रदूषण होता है
4. ✘ इसकी वजह से ध्वनि प्रदूषण होता है

Question Number : 128 Question Id : 7368155584 Question Type : MCQ Option Shuffling : Yes Display Question Number : Yes  
Single Line Question Option : No Option Orientation : Vertical

Correct : 1 Wrong : 0.25

Akash lives in a village. He remains in the field most of the time continuing farming. He bought a Power bank for mobile. Which of the following situations led him to take such a decision

Options :

1. ✘ He is poor
2. ✘ He lives in village
3. ✔ He requires mobile most of the time and could not charge it when he is in the fields
4. ✘ The battery of mo

Question Number : 128 Question Id : 7368155584 Question Type : MCQ Option Shuffling : Yes Display Question Number : Yes  
Single Line Question Option : No Option Orientation : Vertical

Correct : 1 Wrong : 0.25

आकाश एक गाँव में रहता है और वह दिन का अधिकतर समय खेत में किसानी करते हुए गुजारता है। उसने अपने मोबाइल के लिए एक पाँवर बैंक खरीदा। मूलतः किस कारण से उसने यह फैसला लिया होगा?

Options :

1. ✘ वह गरीब है।
2. ✘ वह गाँव में रहता है।  
उसे अधिकतर समय मोबाइल की आवश्यकता होती है, और खेत में वह उसे चार्ज नहीं
3. ✔ कर सकता।
4. ✘ उसके मोबाइल की बैटरी हमेशा कम ही रहती है।

Question Number : 129 Question Id : 7368155585 Question Type : MCQ Option Shuffling : Yes Display Question Number : Yes  
Single Line Question Option : No Option Orientation : Vertical

Correct : 1 Wrong : 0.25

You are a Manager. A male employee is regularly teasing a female employee. She is complaining but it does not happens in front of you. What will you do?

Options :

1. ✔ Get it confirmed from the other employees about this before taking any action
2. ✘ Talk to the female employee and then immediately take an appropriate action
3. ✘ Call the police and handover the male employee to them
4. ✘ Talk to the male employee and assure him that you won't tell this thing to anyone.

Question Number : 129 Question Id : 7368155585 Question Type : MCQ Option Shuffling : Yes Display Question Number : Yes  
Single Line Question Option : No Option Orientation : Vertical

Correct : 1 Wrong : 0.25

आप एक प्रबंधक हैं। एक पुरुष कर्मचारी नियमित तौर पर एक महिला कर्मचारी से छेड़छाड़ कर रहा है। वह आपसे शिकायत कर रही है, परन्तु अभी तक आपकी नज़रों के सामने ऐसा हुआ नहीं है, इस स्थिति में आप क्या करेंगे?

Options :

1. ✔ कोई कार्यवाही करने से पूर्व पहले अन्य कर्मचारियों को पूँछकर इसकी पुष्टि करेंगे।
2. ✘ महिला कर्मचारी से बात करेंगे और उसके बाद एक उचित कदम उठाएंगे।
3. ✘ पुलिस को बुलाकर पुरुष कर्मचारी को उनके हवाले कर दें।
4. ✘ पुरुष कर्मचारी को बुलाकर उसे आश्वासन दें कि आप ये बात किसी को नहीं बताएँगे।

Question Number : 130 Question  
Single Line Question Option : No

Latest Sarkari Jobs, Govt Exam Results,  
Vacancies and updates on one click

Know More

play Question Number : Yes

Correct : 1 Wrong : 0.25

A teacher is asking for bribe for giving good scores in final exam. What will you do if you come to know this

Options :

1. ✘ Take a little money to the teacher and ask whether it would work or not
2. ✘ Go to the Principal alone and talk to him on this
3. ✔ Take other students and their parents along with you to the Principal to talk on this serious issue
4. ✘ Tell the teacher that you would not tell this to anyone if he/she increases your marks

Question Number : 130 Question Id : 7368155586 Question Type : MCQ Option Shuffling : Yes Display Question Number : Yes Single Line Question Option : No Option Orientation : Vertical

Correct : 1 Wrong : 0.25

बच्चों को वार्षिक परीक्षा में अच्छे अंक देने के बदले में एक शिक्षक रिश्वत मांग रहा है। जब आपको यह पता चलेगा तो आप क्या करेंगे?

Options :

1. ✘ शिक्षक को कुछ पैसे देकर पूछेंगे कि उतने काफी हैं या नहीं।
2. ✘ प्रिंसिपल के पास अकेले जायेंगे और उनसे इस बारे में चर्चा करेंगे।
3. ✔ इस गंभीर मुद्दे पर प्राचार्य से वार्तालाप करने के लिए विद्यार्थियों और उनके माता-पिता को भी साथ में ले जाएंगे।
4. ✘ शिक्षक को बोलेंगे कि, यदि वह आपके अंक बढ़ा दे तो आप यह बात किसी को नहीं बताएँगे।

Question Number : 131 Question Id : 7368155587 Question Type : MCQ Option Shuffling : Yes Display Question Number : Yes Single Line Question Option : No Option Orientation : Vertical

Correct : 1 Wrong : 0.25

You are riding on a highway and you saw that a car hit another bike rider coming either way. The car driver ran away taking the car. What will you do?

Options :

1. ✘ Take the injured person immediately to the hospital
2. ✘ Run away
3. ✔ Try to note down the car's number and then immediately take the injured person to the hospital
4. ✘ Wait for the ambulance to pass by

Question Number : 131 Question Id : 7368155587 Question Type : MCQ Option Shuffling : Yes Display Question Number : Yes Single Line Question Option : No Option Orientation : Vertical

Correct : 1 Wrong : 0.25

आप एक हाइवे पर गाडी चला रहे हैं और आपने देखा कि दूसरी ओर से आनेवाले एक बाइक सवार को एक कार ने टक्कर मार दी है। कार चालक अपनी कार लेकर भाग गया है। इस परिस्थिति में आप क्या करेंगे?

Options :

1. ✘ घायल व्यक्ति को तुरंत अस्पताल ले जाएंगे।
2. ✘ भाग जाएंगे।
3. ✔ गाड़ी क्रमांक देखने का प्रयत्न करेंगे और फिर घायल व्यक्ति को तुरंत अस्पताल ले जाएंगे।
4. ✘ किसी एम्बुलेंस के गुजरने का इंतज़ार करेंगे।

Question Number : 132 Question Id : 7368155588 Question Type : MCQ Option Shuffling : Yes Display Question Number : Yes Single Line Question Option : No Option Orientation : Vertical

Correct : 1 Wrong : 0.25

You have been suffering from fever for a past few days. You have take medicines from a guy at medical store but those are not working. What will you do?

Options :

1. ✘ Take some more medicines
2. ✘ Tell your family about this
3. ✔ Consult a doctor
4. ✘ Tell the guy at the medical store to change those medicines

Question Number : 132 Question Id : 7368155588 Question Type : MCQ Option Shuffling : Yes Display Question Number : Yes Single Line Question Option : No Option Orientation : Vertical

Correct : 1 Wrong : 0.25

कुछ दिनों से आप बुखार से पीड़ित हैं। आपने दवाई की दूकान से एक व्यक्ति से कुछ दवाई ले ली, परन्तु वे कुछ काम की नहीं निकली। इस स्थिति में आप क्या करेंगे?

Options :

1. ✘ कुछ दवाई और ले लेंगे।
2. ✘ अपने घरवालों से इसका ज़िक्र करेंगे।
3. ✔ चिकित्सक से परामर्श लेंगे।
4. ✘ दवाई की दूकान पर मौजूद व्यक्ति से दवाई बदलने को कहेंगे।

Question Number : 133 Question Id : 7368155589 Question Type : MCQ Option Shuffling : Yes Display Question Number : Yes Single Line Question Option : No Option Orientation : Vertical

Correct : 1 Wrong : 0.25

You have given upper block of home on rent. The couple living there usually fights which in turn disturbs the society people. What will you do?

Options :

Latest Sarkari Jobs, Govt Exam Results,  
Vacancies and updates on one click

Know More

1. ✘ Call the police and handover them to the police
2. ✔ Warn and tell them not to repeat it in future
3. ✘ Beat them
4. ✘ Won't do anything because it's none of your business

Question Number : 133 Question Id : 7368155589 Question Type : MCQ Option Shuffling : Yes Display Question Number : Yes  
Single Line Question Option : No Option Orientation : Vertical

Correct : 1 Wrong : 0.25

आपने अपने घर का ऊपर का हिस्सा किराए पर दिया हुआ है। वहां रहने वाला जोड़ा अक्सर लड़ता रहता है, जिसकी वजह से मोहल्ले के दूसरे लोग परेशान हो जाते हैं। आप इस स्थिति में क्या करेंगे?

Options :

1. ✘ पुलिस को बुलाकर उन्हें उनके हवाले कर देंगे।
2. ✔ उन्हें चेतावनी देंगे कि भविष्य में इसे ना दोहराएं।
3. ✘ जाकर उन्हें मारेंगे।
4. ✘ कुछ नहीं करेंगे क्योंकि इससे आपका कोई मतलब नहीं है।

Question Number : 134 Question Id : 7368155590 Question Type : MCQ Option Shuffling : Yes Display Question Number : Yes  
Single Line Question Option : No Option Orientation : Vertical

Correct : 1 Wrong : 0.25

Statement: The Finance Minister introduced new reforms in the educational loan systems.

Argument 1: There are many students in engineering field

Argument 2: All the students are poor.

Options :

1. ✘ Argument 1 is strong
2. ✘ Argument 2 is strong
3. ✘ Both the Arguments are strong
4. ✔ Neither of the Arguments are strong

Question Number : 134 Question Id : 7368155590 Question Type : MCQ Option Shuffling : Yes Display Question Number : Yes  
Single Line Question Option : No Option Orientation : Vertical

Correct : 1 Wrong : 0.25

कथन: वित्त मंत्री ने शिक्षा ऋण प्रणाली में नए बदलावों को प्रस्तावित किया।

तर्क 1: देश में अभियांत्रिकी क्षेत्र के बहुत से छात्र हैं।

तर्क 2: सारे छात्र गरीब हैं।

Options :

1. ✘ तर्क 1 ठोस है।

Latest Sarkari Jobs, Govt Exam Results,  
Vacancies and updates on one click

Know More

2. ✘ तर्क 2 ठोस है।
3. ✘ दोनों तर्क ठोस हैं।
4. ✔ कोई भी तर्क ठोस नहीं है।

Question Number : 135 Question Id : 7368155591 Question Type : MCQ Option Shuffling : Yes Display Question Number : Yes  
Single Line Question Option : No Option Orientation : Vertical

Correct : 1 Wrong : 0.25

Statement: The Class Topper of Class 11th was made the School Captain by the Principal in the class 12<sup>th</sup>.

Argument 1: Class Topper of every class is active in co-curricular activities also

Argument 2: Class Topper of 11th is deserving candidate school captaincy.

Options :

1. ✘ Argument 1 is strong
2. ✔ Argument 2 is strong
3. ✘ Both the Arguments are strong
4. ✘ Neither of the Arguments are strong

Question Number : 135 Question Id : 7368155591 Question Type : MCQ Option Shuffling : Yes Display Question Number : Yes  
Single Line Question Option : No Option Orientation : Vertical

Correct : 1 Wrong : 0.25

कथन: 11वीं कक्षा में प्रथम आने वाले छात्र को प्राचार्य ने 12वीं में विद्यालय का कप्तान बनाया।

तर्क 1: हर कक्षा में प्रथम आने वाला छात्र अन्य गतिविधियों में भी आगे रहता है।

तर्क 2: 11वीं कक्षा में प्रथम आने वाला छात्र विद्यालय की कप्तानी के लिए उपयुक्त है।

Options :

1. ✘ तर्क 1 ठोस है।
2. ✔ तर्क 2 ठोस है।
3. ✘ दोनों तर्क ठोस हैं।
4. ✘ कोई भी तर्क ठोस नहीं है।

Question Number : 136 Question Id : 7368155592 Question Type : MCQ Option Shuffling : Yes Display Question Number : Yes  
Single Line Question Option : No Option Orientation : Vertical

Correct : 1 Wrong : 0.25

Statement: Everyone in the Parliament supported the hanging of the Terrorist.

Argument 1: No one should be hanged

Argument 2: No one should be allowed to say about the sentence of the court

Options :

1. ✘ Argument 1 is strong

Latest Sarkari Jobs, Govt Exam Results,  
Vacancies and updates on one click

Know More

2. ✘ Argument 2 is strong
3. ✘ Both the Arguments are strong
4. ✔ Neither of the Arguments are strong

Question Number : 136 Question Id : 7368155592 Question Type : MCQ Option Shuffling : Yes Display Question Number : Yes  
Single Line Question Option : No Option Orientation : Vertical

Correct : 1 Wrong : 0.25

कथन: संसद के हर सदस्य ने आतंकवादी को फांसी देने का समर्थन किया।

तर्क 1: किसी को भी फांसी की सजा नहीं देनी चाहिए।

तर्क 2: अदालत के फैसले पर किसी को भी कुछ बोलने का अधिकार नहीं है।

Options :

1. ✘ तर्क 1 ठोस है।
2. ✘ तर्क 2 ठोस है।
3. ✘ दोनों तर्क ठोस हैं।
4. ✔ कोई भी तर्क ठोस नहीं है।

Question Number : 137 Question Id : 7368155593 Question Type : MCQ Option Shuffling : Yes Display Question Number : Yes  
Single Line Question Option : No Option Orientation : Vertical

Correct : 1 Wrong : 0.25

Statement: The culprits were arrested for campaigning against the nation.

Argument 1: Those who campaign against the nation are culprits

Argument 2: Culprits must be arrested.

Options :

1. ✘ Argument 1 is strong
2. ✘ Argument 2 is strong
3. ✔ Both the Arguments are strong
4. ✘ Neither of the Arguments are strong

Question Number : 137 Question Id : 7368155593 Question Type : MCQ Option Shuffling : Yes Display Question Number : Yes  
Single Line Question Option : No Option Orientation : Vertical

Correct : 1 Wrong : 0.25

कथन: देश के खिलाफ प्रचार करने वाले दोषियों को हिरासत में लिया गया।

तर्क 1: देश के खिलाफ प्रचार करने वाले दोषी होते हैं।

तर्क 2: दोषियों को हिरासत में लेना चाहिए।

Options :

1. ✘ तर्क 1 ठोस है।
2. ✘ तर्क 2 ठोस है।



3. ✓ दोनों तर्क ठोस हैं।

4. ✗ कोई भी तर्क ठोस नहीं है।

Question Number : 138 Question Id : 7368155594 Question Type : MCQ Option Shuffling : Yes Display Question Number : Yes  
Single Line Question Option : No Option Orientation : Vertical

Correct : 1 Wrong : 0.25

Statement: Every section of the society welcomed "The new anti-rape law".

Argument 1: Rapes have become a disgrace to the society in the past few days

Argument 2: The new law is very efficient in controlling rape incidents

Options :

1. ✗ Argument 1 is strong

2. ✗ Argument 2 is strong

3. ✓ Both the Arguments are strong

4. ✗ Neither of the Arguments are strong

Question Number : 138 Question Id : 7368155594 Question Type : MCQ Option Shuffling : Yes Display Question Number : Yes  
Single Line Question Option : No Option Orientation : Vertical

Correct : 1 Wrong : 0.25

कथन: समाज के प्रत्येक वर्ग ने "नए बलात्कार विरोधी कानून" का स्वागत किया।

तर्क 1: बीते दिनों में बलात्कार समाज के लिए अभिशाप बन चुके हैं।

तर्क 2: नया कानून बलात्कार की घटनाओं को रोकने में काफी प्रभावशाली है।

Options :

1. ✗ तर्क 1 ठोस है।

2. ✗ तर्क 2 ठोस है।

3. ✓ दोनों तर्क ठोस हैं।

4. ✗ कोई भी तर्क ठोस नहीं है।

Question Number : 139 Question Id : 7368155595 Question Type : MCQ Option Shuffling : Yes Display Question Number : Yes  
Single Line Question Option : No Option Orientation : Vertical

Correct : 1 Wrong : 0.25

Aditya is brother of Geetika's brother. The son of Geetika is Aditya's.

Options :

1. ✗ Cousin

2. ✗ Son

3. ✓ Nephew

4. ✗ Niece

Question Number : 139 Question  
Single Line Question Option : N

Latest Sarkari Jobs, Govt Exam Results,  
Vacancies and updates on one click

Know More

play Question Number : Yes

Correct : 1 Wrong : 0.25

आदित्य गीतिका के भाई का भाई है। गीतिका के बेटे का आदित्य के साथ क्या रिश्ता है?

Options :

1. ✘ चचेरा/ममेरा/फुफेरा भाई
2. ✘ बेटा
3. ✔ भांजा/भतीजा
4. ✘ भांजी/भतीजी

Question Number : 140 Question Id : 7368155596 Question Type : MCQ Option Shuffling : Yes Display Question Number : Yes Single Line Question Option : No Option Orientation : Vertical

Correct : 1 Wrong : 0.25

The son of your son is \_\_\_\_\_ of your brother's mother's husband.

Options :

1. ✘ Grandfather
2. ✘ Grandson
3. ✔ Great Grandson
4. ✘ Great Grandfather

Question Number : 140 Question Id : 7368155596 Question Type : MCQ Option Shuffling : Yes Display Question Number : Yes Single Line Question Option : No Option Orientation : Vertical

Correct : 1 Wrong : 0.25

आपके बेटे का बेटा आपके भाई की माता के पति का \_\_\_\_\_ है।

Options :

1. ✘ दादा
2. ✘ पोता
3. ✔ परपोता
4. ✘ परदादा/परनाना

Question Number : 141 Question Id : 7368155597 Question Type : MCQ Option Shuffling : Yes Display Question Number : Yes Single Line Question Option : No Option Orientation : Vertical

Correct : 1 Wrong : 0.25

Pointing towards a photograph, Anvesh said, "The mother of this person is the sister of husband of my maternal aunt". What is the relation Anvesh's mother having with the person in the photograph?

Options :

1. ✘ Sister
2. ✘ Sister-in-law
3. ✘ Mother-in-law
4. ✔ Mother

Question Number : 141 Question Id : 7368155597 Question Type : MCQ Option Shuffling : Yes Display Question Number : Yes  
Single Line Question Option : No Option Orientation : Vertical

Correct : 1 Wrong : 0.25

एक फोटो की तरफ इशारा करते हुए अन्वेश ने कहा, "इस व्यक्ति कि माता मेरी मामी के पति की बहन है।" अन्वेश कि माता का उस फोटो में दिख रहे इन्सान के साथ क्या रिश्ता है?

Options :

1. ✘ बहन
2. ✘ ननद
3. ✘ सास
4. ✔ माता

Question Number : 142 Question Id : 7368155598 Question Type : MCQ Option Shuffling : Yes Display Question Number : Yes  
Single Line Question Option : No Option Orientation : Vertical

Correct : 1 Wrong : 0.25

Ankesh is the only son of Naveen's father's wife's mother. How many Maternal Uncles does Naveen have?

Options :

1. ✘ 0
2. ✔ 1
3. ✘ 3
4. ✘ Cannot be predicted

Question Number : 142 Question Id : 7368155598 Question Type : MCQ Option Shuffling : Yes Display Question Number : Yes  
Single Line Question Option : No Option Orientation : Vertical

Correct : 1 Wrong : 0.25

नवीन के पिता की पत्नी की माता का अंकेश इकलौता पुत्र है। नवीन के कितने मामा हैं?

Options :

1. ✘ 0
2. ✔ 1
3. ✘ 3
4. ✘ अनुमान नहीं लगाया जा सकता।

Question Number : 143 Question Id : 7368155599 Question Type : MCQ Option Shuffling : Yes Display Question Number : Yes  
Single Line Question Option : No Option Orientation : Vertical

Correct : 1 Wrong : 0.25

Rishank is the brother of the husband of your mother's daughter. The mother of Rishank is \_\_\_\_\_ of your nephew.

Options :

1. ✘ Mother
2. ✘ Sister
3. ✔ Grandmother

4. ✘ Nothing

Question Number : 143 Question Id : 7368155599 Question Type : MCQ Option Shuffling : Yes Display Question Number : Yes  
Single Line Question Option : No Option Orientation : Vertical

Correct : 1 Wrong : 0.25

रिशंक आपकी माता के बेटे के पति का भाई है। रिशंक की माता आपके भांजे/भतीजे की \_\_\_\_\_ होंगी।

Options :

1. ✘ माता
2. ✘ बहन
3. ✔ दादी/नानी
4. ✘ कुछ नहीं

Question Number : 144 Question Id : 7368155600 Question Type : MCQ Option Shuffling : Yes Display Question Number : Yes  
Single Line Question Option : No Option Orientation : Vertical

Correct : 1 Wrong : 0.25

Find the odd one out from the given alternatives.

Options :

1. ✘ Telephone
2. ✘ Cellphones
3. ✘ WLL
4. ✔ Router

Question Number : 144 Question Id : 7368155600 Question Type : MCQ Option Shuffling : Yes Display Question Number : Yes  
Single Line Question Option : No Option Orientation : Vertical

Correct : 1 Wrong : 0.25

दिये हुए विकल्पों में से विषम को चुनें:

Options :

1. ✘ टेलीफोन
2. ✘ सेलफोन
3. ✘ डब्ल्यूएलएल
4. ✔ राऊटर

Question Number : 145 Question Id : 7368155601 Question Type : MCQ Option Shuffling : Yes Display Question Number : Yes  
Single Line Question Option : No Option Orientation : Vertical

Correct : 1 Wrong : 0.25

Which one of following keywords/phrases differs from the others in the given options?

Options :

1. ✘ ADI
2. ✘ DIP
3. ✘ APY

4. ✓ DYM

Question Number : 145 Question Id : 7368155601 Question Type : MCQ Option Shuffling : Yes Display Question Number : Yes  
Single Line Question Option : No Option Orientation : Vertical

Correct : 1 Wrong : 0.25

निम्नलिखित में से कौन सा संकेत शब्द/वाक्यांश दिये गए अन्य विकल्पों से अलग है?

Options :

1. ✗ ADI
2. ✗ DIP
3. ✗ APY
4. ✓ DYM

Question Number : 146 Question Id : 7368155602 Question Type : MCQ Option Shuffling : Yes Display Question Number : Yes  
Single Line Question Option : No Option Orientation : Vertical

Correct : 1 Wrong : 0.25

In the given alternatives, one of the numbers is dissimilar from the other given alternatives.  
Find the one which is dissimilar.

Options :

1. ✗ 120
2. ✗ 156
3. ✗ 132
4. ✓ 144

Question Number : 146 Question Id : 7368155602 Question Type : MCQ Option Shuffling : Yes Display Question Number : Yes  
Single Line Question Option : No Option Orientation : Vertical

Correct : 1 Wrong : 0.25

दिये हुए विकल्पों में से एक संख्या अन्य दी गई संख्याओं से असमान है। असमान संख्या को ढूँढो

Options :

1. ✗ 120
2. ✗ 156
3. ✗ 132
4. ✓ 144

Question Number : 147 Question Id : 7368155603 Question Type : MCQ Option Shuffling : Yes Display Question Number : Yes  
Single Line Question Option : No Option Orientation : Vertical

Correct : 1 Wrong : 0.25

Find the odd one out from the given alternatives.

Options :

1. ✗ Snake
2. ✗ Crocodile
3. ✗ Earthworm
4. ✓ Shark

Question Number : 147 Question Id : 7368155603 Question Type : MCQ Option Shuffling : Yes Display Question Number : Yes  
Single Line Question Option : No Option Orientation : Vertical

Correct : 1 Wrong : 0.25

दिये हुए विकल्पों में से भिन्न को चुनें।

Options :

1. ✘ सांप
2. ✘ मगरमच्छ
3. ✘ केंचुआ
4. ✔ शार्क

Question Number : 148 Question Id : 7368155604 Question Type : MCQ Option Shuffling : Yes Display Question Number : Yes  
Single Line Question Option : No Option Orientation : Vertical

Correct : 1 Wrong : 0.25

Which one of following keywords/phrases differs from the others in the given options?

Options :

1. ✔ EGJ
2. ✘ ACG
3. ✘ CEI
4. ✘ DFJ

Question Number : 148 Question Id : 7368155604 Question Type : MCQ Option Shuffling : Yes Display Question Number : Yes  
Single Line Question Option : No Option Orientation : Vertical

Correct : 1 Wrong : 0.25

निम्नलिखित में से कौन सा संकेत शब्द/वाक्यांश दिये गए अन्य विकल्पों से अलग है?

Options :

1. ✔ EGJ
2. ✘ ACG
3. ✘ CEI
4. ✘ DFJ

Question Number : 149 Question Id : 7368155605 Question Type : MCQ Option Shuffling : Yes Display Question Number : Yes  
Single Line Question Option : No Option Orientation : Vertical

Correct : 1 Wrong : 0.25

Compute the following

$$5433 \times 8264 = \underline{\hspace{2cm}} \times 44898312$$

Options :

1. ✔ 45
2. ✘ 67
3. ✘ 2
4. ✘ 8

Note: For this question, discrepa

Latest Sarkari Jobs, Govt Exam Results,  
Vacancies and updates on one click

Know More

andidates.

Question Number : 149 Question Id : 7368155605 Question Type : MCQ Option Shuffling : Yes Display Question Number : Yes  
Single Line Question Option : No Option Orientation : Vertical

Correct : 1 Wrong : 0.25

निम्नलिखित की गणना कीजिये :

$$5433 \times 8264 = \underline{\hspace{2cm}} \times 44898312$$

Options :

1. ✓ 45
2. ✗ 67
3. ✗ 2
4. ✗ 8

Note: For this question, discrepancy is found in question/answer. Full Marks is being awarded to all candidates.

Question Number : 150 Question Id : 7368155606 Question Type : MCQ Option Shuffling : Yes Display Question Number : Yes  
Single Line Question Option : No Option Orientation : Vertical

Correct : 1 Wrong : 0.25

Compute the following

$$112 \times 448 = \underline{\hspace{2cm}} \times 784$$

Options :

1. ✓ 64
2. ✗ 12
3. ✗ 77
4. ✗ 89

Question Number : 150 Question Id : 7368155606 Question Type : MCQ Option Shuffling : Yes Display Question Number : Yes  
Single Line Question Option : No Option Orientation : Vertical

Correct : 1 Wrong : 0.25

निम्नलिखित की गणना कीजिये :

$$112 \times 448 = \underline{\hspace{2cm}} \times 784$$

Options :

1. ✓ 64
2. ✗ 12
3. ✗ 77
4. ✗ 89

### General Awareness

Section Id :	736815110
Section Number :	4
Section type :	Online
Mandatory or Optional:	Mandatory
Number of Questions:	50
Number of Questions to be attempted:	50
Section Marks:	50
Display Number Panel:	
Group All Questions:	

Latest Sarkari Jobs, Govt Exam Results,  
Vacancies and updates on one click

Know More

Sub-Section Number: 1  
Sub-Section Id: 736815166  
Question Shuffling Allowed : Yes

Question Number : 151 Question Id : 7368155607 Question Type : MCQ Option Shuffling : Yes Display Question Number : Yes  
Single Line Question Option : No Option Orientation : Vertical

Correct : 1 Wrong : 0.25

In which state, the Panchayat Raj was first introduced?

Options :

1. ✘ Maharashtra
2. ✘ West Bengal
3. ✘ Orissa
4. ✔ Rajasthan

Question Number : 151 Question Id : 7368155607 Question Type : MCQ Option Shuffling : Yes Display Question Number : Yes  
Single Line Question Option : No Option Orientation : Vertical

Correct : 1 Wrong : 0.25

इनमें से कौन से राज्य में पंचायत राज पहली बार शुरू किया गया?

Options :

1. ✘ महाराष्ट्र
2. ✘ पश्चिम बंगाल
3. ✘ उड़ीसा
4. ✔ राजस्थान

Question Number : 152 Question Id : 7368155608 Question Type : MCQ Option Shuffling : Yes Display Question Number : Yes  
Single Line Question Option : No Option Orientation : Vertical

Correct : 1 Wrong : 0.25

The minimum qualifying age for contesting in Panchayat elections is

Options :

1. ✔ 21 years
2. ✘ 30 Years
3. ✘ 18 years
4. ✘ 25 years

Question Number : 152 Question Id : 7368155608 Question Type : MCQ Option Shuffling : Yes Display Question Number : Yes  
Single Line Question Option : No Option Orientation : Vertical

Correct : 1 Wrong : 0.25

पंचायत चुनाव में चुनाव लड़ने के लिए न्यूनतम अर्हता आयु कितनी है?

Options :

1. ✔ 21 वर्ष



2. ✘ 30 वर्ष
3. ✘ 18 वर्ष
4. ✘ 25 वर्ष

Question Number : 153 Question Id : 7368155609 Question Type : MCQ Option Shuffling : Yes Display Question Number : Yes  
Single Line Question Option : No Option Orientation : Vertical

Correct : 1 Wrong : 0.25

The judge of High Court can be removed by

Options :

1. ✘ Governor
2. ✘ Chief Minister
3. ✘ Minister of Law & Justice
4. ✔ President

Question Number : 153 Question Id : 7368155609 Question Type : MCQ Option Shuffling : Yes Display Question Number : Yes  
Single Line Question Option : No Option Orientation : Vertical

Correct : 1 Wrong : 0.25

उच्च न्यायालय के न्यायाधीश को किसके द्वारा पदच्युत किया जा सकता है?

Options :

1. ✘ राज्यपाल
2. ✘ मुख्यमंत्री
3. ✘ कानून और न्याय मंत्री
4. ✔ राष्ट्रपति

Question Number : 154 Question Id : 7368155610 Question Type : MCQ Option Shuffling : Yes Display Question Number : Yes  
Single Line Question Option : No Option Orientation : Vertical

Correct : 1 Wrong : 0.25

PIL stands for

Options :

1. ✔ Public Interest Litigation
2. ✘ Public Investment Law
3. ✘ Petroleum India Limited
4. ✘ Public Investigation Law

Question Number : 154 Question Id : 7368155610 Question Type : MCQ Option Shuffling : Yes Display Question Number : Yes  
Single Line Question Option : No Option Orientation : Vertical

Correct : 1 Wrong : 0.25

पी.आई.एल. का विस्तारित रूप क्या है?

Options :

1. ✔ जनहित याचिका

2. ✘ सार्वजनिक निवेश कानून
3. ✘ पेट्रोलियम इंडिया लिमिटेड
4. ✘ सार्वजनिक जांच कानून

Question Number : 155 Question Id : 7368155611 Question Type : MCQ Option Shuffling : Yes Display Question Number : Yes  
Single Line Question Option : No Option Orientation : Vertical

Correct : 1 Wrong : 0.25

According to which article of Indian constitution a person can be a member of both Lok Sabha and Rajya Sabha?

Options :

1. ✔ Article 101
2. ✘ Article 201
3. ✘ Article 301
4. ✘ Article 401

Note: For this question, discrepancy is found in question/answer. Full Marks is being awarded to all candidates.

Question Number : 155 Question Id : 7368155611 Question Type : MCQ Option Shuffling : Yes Display Question Number : Yes  
Single Line Question Option : No Option Orientation : Vertical

Correct : 1 Wrong : 0.25

भारतीय संविधान के कौन से अनुच्छेद के अनुसार एक व्यक्ति - लोक सभा एवं राज्य सभा, दोनों का सदस्य बन सकता है?

Options :

1. ✔ अनुच्छेद 101
2. ✘ अनुच्छेद 201
3. ✘ अनुच्छेद 301
4. ✘ अनुच्छेद 401

Note: For this question, discrepancy is found in question/answer. Full Marks is being awarded to all candidates.

Question Number : 156 Question Id : 7368155612 Question Type : MCQ Option Shuffling : Yes Display Question Number : Yes  
Single Line Question Option : No Option Orientation : Vertical

Correct : 1 Wrong : 0.25

Who is the first Indian to receive Nobel Prize?

Options :

1. ✘ Srinivas Ramanujan
2. ✔ Rabindranath Tagore
3. ✘ Swami Vivekananda
4. ✘ C.V.Raman

Question Number : 156 Question  
Single Line Question Option : No

Latest Sarkari Jobs, Govt Exam Results,  
Vacancies and updates on one click

Know More

Display Question Number : Yes

Correct : 1 Wrong : 0.25

नोबल पुरस्कार जीतने वाले प्रथम भारतीय कौन है?

Options :

1. ✘ श्रीनिवास रामानुजन
2. ✔ रवीन्द्रनाथ टैगोर
3. ✘ स्वामी विवेकानन्द
4. ✘ सी. वी. रमन

Question Number : 157 Question Id : 7368155613 Question Type : MCQ Option Shuffling : Yes Display Question Number : Yes  
Single Line Question Option : No Option Orientation : Vertical

Correct : 1 Wrong : 0.25

Who was the first IAS officer in Independent India?

Options :

1. ✘ Anna Malhotra
2. ✘ Jay Prakash Narayan
3. ✔ Isha Basant Joshi
4. ✘ Jayashankar

Question Number : 157 Question Id : 7368155613 Question Type : MCQ Option Shuffling : Yes Display Question Number : Yes  
Single Line Question Option : No Option Orientation : Vertical

Correct : 1 Wrong : 0.25

स्वतंत्र भारत के प्रथम आई.ए.एस. अधिकारी कौन थे?

Options :

1. ✘ अन्ना मल्होत्रा
2. ✘ जय प्रकाश नारायण
3. ✔ ईशा बसंत जोशी
4. ✘ जयशंकर

Question Number : 158 Question Id : 7368155614 Question Type : MCQ Option Shuffling : Yes Display Question Number : Yes  
Single Line Question Option : No Option Orientation : Vertical

Correct : 1 Wrong : 0.25

Which one of the following is the highest award for life time achievement in Sports and Games in India?

Options :

1. ✘ Arjuna Award
2. ✘ Rajiv Gandhi Khel Ratna Award
3. ✘ Ashoka Chakra Award
4. ✔ Dhyan Chand Award

Question Number : 158 Question Id : 7368155614 Question Type : MCQ Option Shuffling : Yes Display Question Number : Yes  
Single Line Question Option : No Option Orientation : Vertical

Correct : 1 Wrong : 0.25

भारत में क्रीडा और खेलों में आजीवन उपलब्धि के तौर पर निम्नलिखित में से कौन सा सर्वोच्च पुरस्कार है?

Options :

1. ✘ अर्जुन पुरस्कार
2. ✘ राजीव गांधी खेल रत्न पुरस्कार
3. ✘ अशोक चक्र पुरस्कार
4. ✔ ध्यानचंद पुरस्कार

Question Number : 159 Question Id : 7368155615 Question Type : MCQ Option Shuffling : Yes Display Question Number : Yes  
Single Line Question Option : No Option Orientation : Vertical

Correct : 1 Wrong : 0.25

Which of the following country gives the famous 'Grammy Awards'?

Options :

1. ✘ Russia
2. ✘ Norway
3. ✘ United Kingdom
4. ✔ United States of America

Question Number : 159 Question Id : 7368155615 Question Type : MCQ Option Shuffling : Yes Display Question Number : Yes  
Single Line Question Option : No Option Orientation : Vertical

Correct : 1 Wrong : 0.25

निम्नलिखित में से कौन सा देश प्रसिद्ध 'ग्रैमी पुरस्कार' को प्रदान करता है?

Options :

1. ✘ रूस
2. ✘ नॉर्वे
3. ✘ यूनाइटेड किंगडम
4. ✔ संयुक्त राज्य अमेरिका

Question Number : 160 Question Id : 7368155616 Question Type : MCQ Option Shuffling : Yes Display Question Number : Yes  
Single Line Question Option : No Option Orientation : Vertical

Correct : 1 Wrong : 0.25

The author of the book 'My Experiments with Truth' is

Options :

1. ✘ Rabindranath Tagore
2. ✔ Mahatma Gandhi
3. ✘ Lal Bahadur Shastri

4. ✖ Martin Luther King

Question Number : 160 Question Id : 7368155616 Question Type : MCQ Option Shuffling : Yes Display Question Number : Yes  
Single Line Question Option : No Option Orientation : Vertical

Correct : 1 Wrong : 0.25

‘माय एक्सपेरिमेंट्स विथ ट्रूथ’ (सत्य के प्रयोग) पुस्तक के लेखक कौन हैं?

Options :

1. ✖ रवीन्द्रनाथ टैगोर
2. ✔ महात्मा गांधी
3. ✖ लाल बहादुर शास्त्री
4. ✖ मार्टिन लूथर किंग

Question Number : 161 Question Id : 7368155617 Question Type : MCQ Option Shuffling : Yes Display Question Number : Yes  
Single Line Question Option : No Option Orientation : Vertical

Correct : 1 Wrong : 0.25

The famous patriotic song ‘Sare Jahan Se Accha’ was written by

Options :

1. ✖ Bankim Chandra Chatterjee
2. ✖ Rabindranath Tagore
3. ✔ Mohammed Iqbal
4. ✖ Moulana Abul Kalam Azad

Question Number : 161 Question Id : 7368155617 Question Type : MCQ Option Shuffling : Yes Display Question Number : Yes  
Single Line Question Option : No Option Orientation : Vertical

Correct : 1 Wrong : 0.25

‘सारे जहां से अच्छा’ इस प्रसिद्ध देशभक्ति गीत को किसने लिखा था?

Options :

1. ✖ बंकिम चन्द्र चटर्जी
2. ✖ रवीन्द्रनाथ टैगोर
3. ✔ मोहम्मद इकबाल
4. ✖ मौलाना अबुल कलाम आज़ाद

Question Number : 162 Question Id : 7368155618 Question Type : MCQ Option Shuffling : Yes Display Question Number : Yes  
Single Line Question Option : No Option Orientation : Vertical

Correct : 1 Wrong : 0.25

Nobel Prizes are given in the honor of?

Options :

1. ✖ Charles Darwin
2. ✖ Thomas Alva Edison

3. ✓ Alfred Nobel
4. ✗ Albert Einstein

Question Number : 162 Question Id : 7368155618 Question Type : MCQ Option Shuffling : Yes Display Question Number : Yes  
Single Line Question Option : No Option Orientation : Vertical

Correct : 1 Wrong : 0.25

किसके सम्मान में नोबल पुरस्कार दिया जाता है?

Options :

1. ✗ चार्ल्स डार्विन
2. ✗ थॉमस अल्वा एडीसन
3. ✓ अल्फ्रेड नोबेल
4. ✗ अल्बर्ट आइंस्टीन

Question Number : 163 Question Id : 7368155619 Question Type : MCQ Option Shuffling : Yes Display Question Number : Yes  
Single Line Question Option : No Option Orientation : Vertical

Correct : 1 Wrong : 0.25

'Arthashastra' a famous book on Commerce was written by

Options :

1. ✗ Vishnu Sharma
2. ✗ Kalidas
3. ✗ Surdas
4. ✓ Kautilya

Question Number : 163 Question Id : 7368155619 Question Type : MCQ Option Shuffling : Yes Display Question Number : Yes  
Single Line Question Option : No Option Orientation : Vertical

Correct : 1 Wrong : 0.25

वाणिज्य संबंधी 'अर्थशास्त्र' इस प्रसिद्ध पुस्तक के लेखक कौन है?

Options :

1. ✗ विष्णु शर्मा
2. ✗ कालिदास
3. ✗ सूरदास
4. ✓ कौटिल्य

Question Number : 164 Question Id : 7368155620 Question Type : MCQ Option Shuffling : Yes Display Question Number : Yes  
Single Line Question Option : No Option Orientation : Vertical

Correct : 1 Wrong : 0.25

'Anandmatt', a famous Bengali novel was written by

Options :

1. ✓ Bankim Chandra Chattopadhyay
2. ✗ Rabindranath Tagore

3. ✘ Sukanta Bhattacharya
4. ✘ Sharadindu Bandyopadhyay

Question Number : 164 Question Id : 7368155620 Question Type : MCQ Option Shuffling : Yes Display Question Number : Yes  
Single Line Question Option : No Option Orientation : Vertical

Correct : 1 Wrong : 0.25

‘आनंद मठ’ इस प्रसिद्ध बंगाली उपन्यास के लेखक \_\_\_\_\_ हैं।

Options :

1. ✔ बंकिम चंद्र चट्टोपाध्याय
2. ✘ रवींद्रनाथ टैगोर
3. ✘ सुकांता भट्टाचार्य
4. ✘ शरदिंदु बंद्योपाध्याय

Question Number : 165 Question Id : 7368155621 Question Type : MCQ Option Shuffling : Yes Display Question Number : Yes  
Single Line Question Option : No Option Orientation : Vertical

Correct : 1 Wrong : 0.25

The title of autobiography of Adolf Hitler is

Options :

1. ✘ Moon Walk
2. ✔ Mein Kampf
3. ✘ Guns and Grenades
4. ✘ Trigger

Question Number : 165 Question Id : 7368155621 Question Type : MCQ Option Shuffling : Yes Display Question Number : Yes  
Single Line Question Option : No Option Orientation : Vertical

Correct : 1 Wrong : 0.25

एडॉल्फ हिटलर की आत्मकथा का शीर्षक क्या है?

Options :

1. ✘ मून वॉक
2. ✔ मीन कैम्फ
3. ✘ गन्स एंड ग्रेनेड्स
4. ✘ ट्रिगर

Question Number : 166 Question Id : 7368155622 Question Type : MCQ Option Shuffling : Yes Display Question Number : Yes  
Single Line Question Option : No Option Orientation : Vertical

Correct : 1 Wrong : 0.25

The famous ‘Golden Temple’ is located in?

Options :

1. ✔ Amritsar

2. ✘ Jaipur
3. ✘ Agra
4. ✘ Mathura

Question Number : 166 Question Id : 7368155622 Question Type : MCQ Option Shuffling : Yes Display Question Number : Yes  
Single Line Question Option : No Option Orientation : Vertical

Correct : 1 Wrong : 0.25

प्रसिद्ध 'स्वर्ण मन्दिर' कहाँ पर स्थित है?

Options :

1. ✔ अमृतसर
2. ✘ जयपुर
3. ✘ आगरा
4. ✘ मथुरा

Question Number : 167 Question Id : 7368155623 Question Type : MCQ Option Shuffling : Yes Display Question Number : Yes  
Single Line Question Option : No Option Orientation : Vertical

Correct : 1 Wrong : 0.25

Which one of the following is the first Indian talkie movie?

Options :

1. ✘ Satya Harischandra
2. ✔ Alam Ara
3. ✘ Kalidas
4. ✘ Valmiki Pratima

Question Number : 167 Question Id : 7368155623 Question Type : MCQ Option Shuffling : Yes Display Question Number : Yes  
Single Line Question Option : No Option Orientation : Vertical

Correct : 1 Wrong : 0.25

निम्नलिखित में से कौन सी भारत की पहली भारतीय टॉकी फिल्म (वाक्पट) है?

Options :

1. ✘ सत्य हरिश्चन्द्र
2. ✔ आलम आरा
3. ✘ कालिदास
4. ✘ वाल्मिकी प्रतिमा

Question Number : 168 Question Id : 7368155624 Question Type : MCQ Option Shuffling : Yes Display Question Number : Yes  
Single Line Question Option : No Option Orientation : Vertical

Correct : 1 Wrong : 0.25

'Bhangra' is the traditional dance of which Indian State?

Options :

1. ✔ Punjab
2. ✘ Goa



3. ✘ Maharashtra

4. ✘ West Bengal

Question Number : 168 Question Id : 7368155624 Question Type : MCQ Option Shuffling : Yes Display Question Number : Yes  
Single Line Question Option : No Option Orientation : Vertical

Correct : 1 Wrong : 0.25

‘भांगड़ा’ नृत्य भारत के किस राज्य का पारंपारिक नृत्य है?

Options :

1. ✔ पंजाब

2. ✘ गोवा

3. ✘ महाराष्ट्र

4. ✘ पश्चिम बंगाल

Question Number : 169 Question Id : 7368155625 Question Type : MCQ Option Shuffling : Yes Display Question Number : Yes  
Single Line Question Option : No Option Orientation : Vertical

Correct : 1 Wrong : 0.25

‘Dumhal’ is a famous Indian dance in which of the following States?

Options :

1. ✔ Jammu & Kashmir

2. ✘ Goa

3. ✘ Manipur

4. ✘ Karnataka

Question Number : 169 Question Id : 7368155625 Question Type : MCQ Option Shuffling : Yes Display Question Number : Yes  
Single Line Question Option : No Option Orientation : Vertical

Correct : 1 Wrong : 0.25

निम्नलिखित में से कौन से राज्य का ‘डम्हाल’ एक प्रसिद्ध भारतीय नृत्य है?

Options :

1. ✔ जम्मू-कश्मीर

2. ✘ गोवा

3. ✘ मणिपुर

4. ✘ कर्नाटक

Question Number : 170 Question Id : 7368155626 Question Type : MCQ Option Shuffling : Yes Display Question Number : Yes  
Single Line Question Option : No Option Orientation : Vertical

Correct : 1 Wrong : 0.25

The famous food item ‘Dhokla’ is originated from?

Options :

1. ✘ Kerala

2. ✘ Assam

3. ✓ Gujarat

4. ✗ Bihar

Question Number : 170 Question Id : 7368155626 Question Type : MCQ Option Shuffling : Yes Display Question Number : Yes  
Single Line Question Option : No Option Orientation : Vertical

Correct : 1 Wrong : 0.25

प्रसिद्ध व्यंजन 'ढोकला' का उद्गम कौन से राज्य से हुआ है?

Options :

1. ✗ केरल

2. ✗ असम

3. ✓ गुजरात

4. ✗ बिहार

Question Number : 171 Question Id : 7368155627 Question Type : MCQ Option Shuffling : Yes Display Question Number : Yes  
Single Line Question Option : No Option Orientation : Vertical

Correct : 1 Wrong : 0.25

The longest serving Chief Minister for an Indian state is?

Options :

1. ✗ Sushma Swaraj

2. ✓ Jyoti Basu

3. ✗ Laloo Prasad Yadav

4. ✗ Mamata Banerjee

Question Number : 171 Question Id : 7368155627 Question Type : MCQ Option Shuffling : Yes Display Question Number : Yes  
Single Line Question Option : No Option Orientation : Vertical

Correct : 1 Wrong : 0.25

भारत के एक राज्य के सबसे लम्बे समय तक कार्यरत मुख्यमंत्री कौन रहे हैं?

Options :

1. ✗ सुषमा स्वराज

2. ✓ ज्योति बसु

3. ✗ लालू प्रसाद यादव

4. ✗ ममता बनर्जी

Question Number : 172 Question Id : 7368155628 Question Type : MCQ Option Shuffling : Yes Display Question Number : Yes  
Single Line Question Option : No Option Orientation : Vertical

Correct : 1 Wrong : 0.25

The appointment of district judges in a state is carried out by

Options :

1. ✗ High Court judge

2. ✗ Chief Justice of S

Latest Sarkari Jobs, Govt Exam Results,  
Vacancies and updates on one click

Know More

3. ✓ Governor

4. ✗ President

Question Number : 172 Question Id : 7368155628 Question Type : MCQ Option Shuffling : Yes Display Question Number : Yes  
Single Line Question Option : No Option Orientation : Vertical

Correct : 1 Wrong : 0.25

एक राज्य में जिला न्यायाधीशों की नियुक्ति किसके द्वारा की जाती है?

Options :

1. ✗ उच्च न्यायालय के न्यायमूर्ति

2. ✗ सर्वोच्च न्यायालय के मुख्य न्यायाधीश

3. ✓ राज्यपाल

4. ✗ राष्ट्रपति

Question Number : 173 Question Id : 7368155629 Question Type : MCQ Option Shuffling : Yes Display Question Number : Yes  
Single Line Question Option : No Option Orientation : Vertical

Correct : 1 Wrong : 0.25

\_\_\_\_\_ is considered as 'Father of All India Services'.

Options :

1. ✗ Jayprakash Narayan

2. ✗ Lab Bahadur Shastri

3. ✗ Lala Lajpat Rai

4. ✓ Sardar Vallabhai Patel

Question Number : 173 Question Id : 7368155629 Question Type : MCQ Option Shuffling : Yes Display Question Number : Yes  
Single Line Question Option : No Option Orientation : Vertical

Correct : 1 Wrong : 0.25

\_\_\_\_\_ को 'अखिल भारतीय सेवाओं के जनक' माना जाता है।

Options :

1. ✗ जयप्रकाश नारायण

2. ✗ लाल बहादुर शास्त्री

3. ✗ लाला लाजपत राय

4. ✓ सरदार वल्लभभाई पटेल

Question Number : 174 Question Id : 7368155630 Question Type : MCQ Option Shuffling : Yes Display Question Number : Yes  
Single Line Question Option : No Option Orientation : Vertical

Correct : 1 Wrong : 0.25

The members of Union Public Service Commission are appointed by

Options :

1. ✓ President

2. ✗ Prime Minister

3. ✘ Chief Justice
4. ✘ Human Resources Development Ministry

Question Number : 174 Question Id : 7368155630 Question Type : MCQ Option Shuffling : Yes Display Question Number : Yes  
Single Line Question Option : No Option Orientation : Vertical

Correct : 1 Wrong : 0.25

संघ लोक सेवा आयोग के सदस्यों की नियुक्ति किसके द्वारा की जाती है?

Options :

1. ✔ राष्ट्रपति
2. ✘ प्रधानमंत्री
3. ✘ मुख्य न्यायाधीश
4. ✘ मानव संसाधन विकास मंत्रालय

Question Number : 175 Question Id : 7368155631 Question Type : MCQ Option Shuffling : Yes Display Question Number : Yes  
Single Line Question Option : No Option Orientation : Vertical

Correct : 1 Wrong : 0.25

The present Chief Election Commissioner of India is

Options :

1. ✘ Govindhan Kutty
2. ✔ Naseem Zaidi
3. ✘ S.Y.Quraishi
4. ✘ H.S.Thakur

Question Number : 175 Question Id : 7368155631 Question Type : MCQ Option Shuffling : Yes Display Question Number : Yes  
Single Line Question Option : No Option Orientation : Vertical

Correct : 1 Wrong : 0.25

भारत के वर्तमान मुख्य चुनाव आयुक्त कौन है?

Options :

1. ✘ गोविन्दन कुट्टी
2. ✔ नसीम जैदी
3. ✘ एस. वाई. कुरैशी
4. ✘ एच. एस. ठाकुर

Question Number : 176 Question Id : 7368155632 Question Type : MCQ Option Shuffling : Yes Display Question Number : Yes  
Single Line Question Option : No Option Orientation : Vertical

Correct : 1 Wrong : 0.25

The present CEO of Infosys is

Options :

1. ✔ Vishal Sikka

2. ✘ Narayana murthy
3. ✘ N.S.Raghavan
4. ✘ Ashok Arora

Question Number : 176 Question Id : 7368155632 Question Type : MCQ Option Shuffling : Yes Display Question Number : Yes  
Single Line Question Option : No Option Orientation : Vertical

Correct : 1 Wrong : 0.25

इंफोसिस के वर्तमान सी.ई.ओ. कौन है?

Options :

1. ✔ विशाल सिक्का
2. ✘ नारायण मूर्ति
3. ✘ एन.एस. राघवन
4. ✘ अशोक अरोरा

Question Number : 177 Question Id : 7368155633 Question Type : MCQ Option Shuffling : Yes Display Question Number : Yes  
Single Line Question Option : No Option Orientation : Vertical

Correct : 1 Wrong : 0.25

The present secretary general of UNO is

Options :

1. ✘ Kofi Annan
2. ✘ Buthros ghali
3. ✔ Ban Ki-moon
4. ✘ Kim Cho Ten

Question Number : 177 Question Id : 7368155633 Question Type : MCQ Option Shuffling : Yes Display Question Number : Yes  
Single Line Question Option : No Option Orientation : Vertical

Correct : 1 Wrong : 0.25

यू.एन.ओ. के वर्तमान प्रधान सचिव कौन है?

Options :

1. ✘ कोफी अन्नान
2. ✘ बुतरस घाली
3. ✔ बान की मून
4. ✘ किम चो टेन

Question Number : 178 Question Id : 7368155634 Question Type : MCQ Option Shuffling : Yes Display Question Number : Yes  
Single Line Question Option : No Option Orientation : Vertical

Correct : 1 Wrong : 0.25

Who received K.Veeramani Social justice award for the year 2016?

Options :

1. ✘ Lalu Prasad Yadav

2. ✓ Nitish Kumar
3. ✗ Karuna Nidhi
4. ✗ Akhilesh Yadav

Question Number : 178 Question Id : 7368155634 Question Type : MCQ Option Shuffling : Yes Display Question Number : Yes  
Single Line Question Option : No Option Orientation : Vertical

Correct : 1 Wrong : 0.25

वर्ष 2016 का 'के. वीरमनी सामाजिक न्याय पुरस्कार' किसे दिया गया है?

Options :

1. ✗ लालू प्रसाद यादव
2. ✓ नितीश कुमार
3. ✗ करुणानिधि
4. ✗ अखिलेश यादव

Question Number : 179 Question Id : 7368155635 Question Type : MCQ Option Shuffling : Yes Display Question Number : Yes  
Single Line Question Option : No Option Orientation : Vertical

Correct : 1 Wrong : 0.25

Who is the present captain of Indian Women cricket team?

Options :

1. ✓ Mithali Raj
2. ✗ Purnima Rao
3. ✗ Shweta Goswami
4. ✗ Poonam Raut

Question Number : 179 Question Id : 7368155635 Question Type : MCQ Option Shuffling : Yes Display Question Number : Yes  
Single Line Question Option : No Option Orientation : Vertical

Correct : 1 Wrong : 0.25

भारत के महिला क्रिकेट दल की वर्तमान कप्तान कौन है?

Options :

1. ✓ मिताली राज
2. ✗ पूर्णिमा राव
3. ✗ श्वेता गोस्वामी
4. ✗ पूनम राउत

Question Number : 180 Question Id : 7368155636 Question Type : MCQ Option Shuffling : Yes Display Question Number : Yes  
Single Line Question Option : No Option Orientation : Vertical

Correct : 1 Wrong : 0.25

The present Chief Minister of Tamil Nadu is?

Options :

1. ✗ M.K. Stalin

2. ✘ Paneer Selvam
3. ✘ M. Karunanidhi
4. ✔ J. Jayalalithaa

Question Number : 180 Question Id : 7368155636 Question Type : MCQ Option Shuffling : Yes Display Question Number : Yes  
Single Line Question Option : No Option Orientation : Vertical

Correct : 1 Wrong : 0.25

तमिलनाडु के वर्तमान मुख्यमंत्री कौन है?

Options :

1. ✘ एम.के.स्टालिन
2. ✘ पन्नीरसेल्वम
3. ✘ एम. करुणानिधि
4. ✔ जे. जयललिता

Question Number : 181 Question Id : 7368155637 Question Type : MCQ Option Shuffling : Yes Display Question Number : Yes  
Single Line Question Option : No Option Orientation : Vertical

Correct : 1 Wrong : 0.25

\_\_\_\_\_ is the highest coal producing State in India.

Options :

1. ✘ Maharashtra
2. ✘ Madhya Pradesh
3. ✔ Chhattisgarh
4. ✘ Jammu & Kashmir

Question Number : 181 Question Id : 7368155637 Question Type : MCQ Option Shuffling : Yes Display Question Number : Yes  
Single Line Question Option : No Option Orientation : Vertical

Correct : 1 Wrong : 0.25

भारत के \_\_\_\_\_ राज्य में कोयले का सबसे अधिक उत्पादन होता है।

Options :

1. ✘ महाराष्ट्र
2. ✘ मध्य प्रदेश
3. ✔ छत्तीसगढ़
4. ✘ जम्मू एवं कश्मीर

Question Number : 182 Question Id : 7368155638 Question Type : MCQ Option Shuffling : Yes Display Question Number : Yes  
Single Line Question Option : No Option Orientation : Vertical

Correct : 1 Wrong : 0.25

The Durgapur Steel plant is established with the help of?

Options :

1. ✘ United States of America

2. ❌ Sri Lanka
3. ❌ Russia
4. ✅ United Kingdom

Question Number : 182 Question Id : 7368155638 Question Type : MCQ Option Shuffling : Yes Display Question Number : Yes  
Single Line Question Option : No Option Orientation : Vertical

Correct : 1 Wrong : 0.25

दुर्गापुर स्टील संयंत्र की स्थापना किसकी सहायता से की गई थी?

Options :

1. ❌ संयुक्त राज्य अमेरिका
2. ❌ श्रीलंका
3. ❌ रूस
4. ✅ यूनाइटेड किंगडम

Question Number : 183 Question Id : 7368155639 Question Type : MCQ Option Shuffling : Yes Display Question Number : Yes  
Single Line Question Option : No Option Orientation : Vertical

Correct : 1 Wrong : 0.25

National Rural Development Institute is located in?

Options :

1. ❌ Bangalore
2. ❌ Lucknow
3. ✅ Hyderabad
4. ❌ Pune

Question Number : 183 Question Id : 7368155639 Question Type : MCQ Option Shuffling : Yes Display Question Number : Yes  
Single Line Question Option : No Option Orientation : Vertical

Correct : 1 Wrong : 0.25

राष्ट्रीय ग्रामीण विकास संस्थान कहाँ पर स्थित है?

Options :

1. ❌ बेंगलोर
2. ❌ लखनऊ
3. ✅ हैदराबाद
4. ❌ पुणे

Question Number : 184 Question Id : 7368155640 Question Type : MCQ Option Shuffling : Yes Display Question Number : Yes  
Single Line Question Option : No Option Orientation : Vertical

Correct : 1 Wrong : 0.25

Which one of the following cities was the former capital of India?

Options :

1. ❌ Mumbai



2. ✘ Jaipur
3. ✘ Lucknow
4. ✔ Calcutta

Question Number : 184 Question Id : 7368155640 Question Type : MCQ Option Shuffling : Yes Display Question Number : Yes  
Single Line Question Option : No Option Orientation : Vertical

Correct : 1 Wrong : 0.25

निम्नलिखित में से कौन सा शहर भारत की पूर्व राजधानी थी?

Options :

1. ✘ मुंबई
2. ✘ जयपुर
3. ✘ लखनऊ
4. ✔ कलकत्ता

Question Number : 185 Question Id : 7368155641 Question Type : MCQ Option Shuffling : Yes Display Question Number : Yes  
Single Line Question Option : No Option Orientation : Vertical

Correct : 1 Wrong : 0.25

The highly populated Indian State is?

Options :

1. ✘ West Bengal
2. ✔ Uttar Pradesh
3. ✘ Madhya Pradesh
4. ✘ Karnataka

Question Number : 185 Question Id : 7368155641 Question Type : MCQ Option Shuffling : Yes Display Question Number : Yes  
Single Line Question Option : No Option Orientation : Vertical

Correct : 1 Wrong : 0.25

कौन से भारतीय राज्य की जनसंख्या सबसे अधिक है?

Options :

1. ✘ पश्चिम बंगाल
2. ✔ उत्तर प्रदेश
3. ✘ मध्य प्रदेश
4. ✘ कर्नाटक

Question Number : 186 Question Id : 7368155642 Question Type : MCQ Option Shuffling : Yes Display Question Number : Yes  
Single Line Question Option : No Option Orientation : Vertical

Correct : 1 Wrong : 0.25

The youngest folded mountain in the world is?

Options :

1. ✔ The Himalayas

2. ✘ Nilgiris
3. ✘ Aravalli
4. ✘ Andes

Question Number : 186 Question Id : 7368155642 Question Type : MCQ Option Shuffling : Yes Display Question Number : Yes  
Single Line Question Option : No Option Orientation : Vertical

Correct : 1 Wrong : 0.25

विश्व में सबसे नया वलित पर्वत कौन सा है?

Options :

1. ✔ हिमालय
2. ✘ नीलगिरी
3. ✘ अरावली
4. ✘ एंडीज

Question Number : 187 Question Id : 7368155643 Question Type : MCQ Option Shuffling : Yes Display Question Number : Yes  
Single Line Question Option : No Option Orientation : Vertical

Correct : 1 Wrong : 0.25

थार रेगिस्तान का प्रमुख भाग कहाँ पर स्थित है?

Options :

1. ✘ मध्य प्रदेश
2. ✔ राजस्थान
3. ✘ गुजरात
4. ✘ उत्तर प्रदेश

Question Number : 187 Question Id : 7368155643 Question Type : MCQ Option Shuffling : Yes Display Question Number : Yes  
Single Line Question Option : No Option Orientation : Vertical

Correct : 1 Wrong : 0.25

The major part of Thar Desert is located in?

Options :

1. ✘ Madhya Pradesh
2. ✔ Rajasthan
3. ✘ Gujarat
4. ✘ Uttar Pradesh

Question Number : 188 Question Id : 7368155644 Question Type : MCQ Option Shuffling : Yes Display Question Number : Yes  
Single Line Question Option : No Option Orientation : Vertical

Correct : 1 Wrong : 0.25

From the following Indian States, which State has the longest coastline?

Options :

1. ✔ Andhra Pradesh

2. ✘ Maharashtra
3. ✘ Tamil Nadu
4. ✘ Kerala

Question Number : 188 Question Id : 7368155644 Question Type : MCQ Option Shuffling : Yes Display Question Number : Yes  
Single Line Question Option : No Option Orientation : Vertical

Correct : 1 Wrong : 0.25

निम्नलिखित भारतीय राज्यों में से, किस राज्य की तटरेखा सबसे अधिक लम्बी है?

Options :

1. ✔ आंध्र प्रदेश
2. ✘ महाराष्ट्र
3. ✘ तमिलनाडु
4. ✘ केरल

Question Number : 189 Question Id : 7368155645 Question Type : MCQ Option Shuffling : Yes Display Question Number : Yes  
Single Line Question Option : No Option Orientation : Vertical

Correct : 1 Wrong : 0.25

The country which is popularly known as the 'Sugar Bowl of the World' is

Options :

1. ✘ China
2. ✘ Argentina
3. ✘ Canada
4. ✔ Cuba

Question Number : 189 Question Id : 7368155645 Question Type : MCQ Option Shuffling : Yes Display Question Number : Yes  
Single Line Question Option : No Option Orientation : Vertical

Correct : 1 Wrong : 0.25

'शुगर ऑफ बाऊल ऑफ द वर्ल्ड' के नाम से कौन सा देश प्रसिद्ध है?

Options :

1. ✘ चीन
2. ✘ अर्जेंटीना
3. ✘ कनाडा
4. ✔ क्यूबा

Question Number : 190 Question Id : 7368155646 Question Type : MCQ Option Shuffling : Yes Display Question Number : Yes  
Single Line Question Option : No Option Orientation : Vertical

Correct : 1 Wrong : 0.25

The Northern part of Western Ghats is known as?

Options :

1. ✘ Nilgiri Range

2. ✓ Sahayadri Range
3. ✗ Kaveri Range
4. ✗ Annamalai Range

Question Number : 190 Question Id : 7368155646 Question Type : MCQ Option Shuffling : Yes Display Question Number : Yes  
Single Line Question Option : No Option Orientation : Vertical  
Correct : 1 Wrong : 0.25

पश्चिमी घाट के उत्तरी भाग को क्या कहा जाता है?

Options :

1. ✗ नीलगिरी शृंखला
2. ✓ सहयाद्री शृंखला
3. ✗ कावेरी शृंखला
4. ✗ अन्नामलाई शृंखला

Question Number : 191 Question Id : 7368155647 Question Type : MCQ Option Shuffling : Yes Display Question Number : Yes  
Single Line Question Option : No Option Orientation : Vertical  
Correct : 1 Wrong : 0.25

The 'Jallianwala Bagh Massacre' took place during the regime of?

Options :

1. ✓ General Dior
2. ✗ Warren Hastings
3. ✗ Dalhousie
4. ✗ Lord Curzon

Question Number : 191 Question Id : 7368155647 Question Type : MCQ Option Shuffling : Yes Display Question Number : Yes  
Single Line Question Option : No Option Orientation : Vertical  
Correct : 1 Wrong : 0.25

किसके शासन के दौरान 'जलियाँवाला बाग हत्याकांड' हुआ था?

Options :

1. ✓ जनरल डायर
2. ✗ वॉरेन हेस्टिंग्स
3. ✗ डलहौजी
4. ✗ लॉर्ड कर्जन

Question Number : 192 Question Id : 7368155648 Question Type : MCQ Option Shuffling : Yes Display Question Number : Yes  
Single Line Question Option : No Option Orientation : Vertical  
Correct : 1 Wrong : 0.25

Who among the following is known as 'Lokamanya'?

Options :

1. ✗ Sardar Vallabhbhai

Latest Sarkari Jobs, Govt Exam Results, Vacancies and updates on one click [Know More](#)

2. ✓ Bal Gangadhar Tilak
3. ✗ Swami Vivekananda
4. ✗ Lal Bahadur Shastri

Question Number : 192 Question Id : 7368155648 Question Type : MCQ Option Shuffling : Yes Display Question Number : Yes  
Single Line Question Option : No Option Orientation : Vertical

Correct : 1 Wrong : 0.25

निम्नलिखित में से कौन 'लोकमान्य' इस नाम से प्रसिद्ध है?

Options :

1. ✗ सरदार वल्लभभाई पटेल
2. ✓ बाल गंगाधर तिलक
3. ✗ स्वामी विवेकानंद
4. ✗ लाल बहादुर शास्त्री

Question Number : 193 Question Id : 7368155649 Question Type : MCQ Option Shuffling : Yes Display Question Number : Yes  
Single Line Question Option : No Option Orientation : Vertical

Correct : 1 Wrong : 0.25

Who was the first President of Indian National Congress?

Options :

1. ✗ Motilal Nehru
2. ✗ A.O.Hume
3. ✓ W.C.Banerjee
4. ✗ Jawaharlal Nehru

Question Number : 193 Question Id : 7368155649 Question Type : MCQ Option Shuffling : Yes Display Question Number : Yes  
Single Line Question Option : No Option Orientation : Vertical

Correct : 1 Wrong : 0.25

भारतीय राष्ट्रीय कांग्रेस के पहले अध्यक्ष कौन थे?

Options :

1. ✗ मोतीलाल नेहरू
2. ✗ ए. ओ. ह्यूम
3. ✓ डब्ल्यू. सी. बनर्जी
4. ✗ जवाहरलाल नेहरू

Question Number : 194 Question Id : 7368155650 Question Type : MCQ Option Shuffling : Yes Display Question Number : Yes  
Single Line Question Option : No Option Orientation : Vertical

Correct : 1 Wrong : 0.25

The last European country to enter India for trade is?

Options :

1. ✗ Chinese

2. ✘ Spanish
3. ✘ British
4. ✔ French

Question Number : 194 Question Id : 7368155650 Question Type : MCQ Option Shuffling : Yes Display Question Number : Yes  
Single Line Question Option : No Option Orientation : Vertical

Correct : 1 Wrong : 0.25

भारत में व्यापार के लिए आनेवाला अंतिम यूरोपीय देश इनमें से कौन सा था?

Options :

1. ✘ चीनी
2. ✘ स्पैनिश
3. ✘ ब्रिटिश
4. ✔ फ्रेंच

Question Number : 195 Question Id : 7368155651 Question Type : MCQ Option Shuffling : Yes Display Question Number : Yes  
Single Line Question Option : No Option Orientation : Vertical

Correct : 1 Wrong : 0.25

The first battle of Panipat was fought between Babar and

Options :

1. ✘ Akbar
2. ✘ Humayun
3. ✔ Ibrahim Lodi
4. ✘ Jahangir

Question Number : 195 Question Id : 7368155651 Question Type : MCQ Option Shuffling : Yes Display Question Number : Yes  
Single Line Question Option : No Option Orientation : Vertical

Correct : 1 Wrong : 0.25

पानीपत का पहला युद्ध बाबर और \_\_\_\_\_ के बीच में हुआ था।

Options :

1. ✘ अकबर
2. ✘ हुमायूँ
3. ✔ इब्राहिम लोधी
4. ✘ जहांगीर

Question Number : 196 Question Id : 7368155652 Question Type : MCQ Option Shuffling : Yes Display Question Number : Yes  
Single Line Question Option : No Option Orientation : Vertical

Correct : 1 Wrong : 0.25

With which sport Saina Nehwal is associated?

Options :

1. ✘ Table Tennis

2. ✘ Athletics
3. ✘ Lawn Tennis
4. ✔ Badminton

Question Number : 196 Question Id : 7368155652 Question Type : MCQ Option Shuffling : Yes Display Question Number : Yes  
Single Line Question Option : No Option Orientation : Vertical

Correct : 1 Wrong : 0.25

साइना नेहवाल किस खेल से जुड़ी है?

Options :

1. ✘ टेबल टेनिस
2. ✘ एथलेटिक्स
3. ✘ लॉन टेनिस
4. ✔ बैडमिंटन

Question Number : 197 Question Id : 7368155653 Question Type : MCQ Option Shuffling : Yes Display Question Number : Yes  
Single Line Question Option : No Option Orientation : Vertical

Correct : 1 Wrong : 0.25

Who among the following has never been a captain for Indian Cricket Team?

Options :

1. ✔ Javagal Srinath
2. ✘ Saurav Ganguly
3. ✘ Azharuddin
4. ✘ Kapil Dev

Question Number : 197 Question Id : 7368155653 Question Type : MCQ Option Shuffling : Yes Display Question Number : Yes  
Single Line Question Option : No Option Orientation : Vertical

Correct : 1 Wrong : 0.25

निम्नलिखित में से कौन, भारतीय क्रिकेट टीम का कभी कप्तान नहीं था?

Options :

1. ✔ जवागल श्रीनाथ
2. ✘ सौरव गांगुली
3. ✘ अजहरुद्दीन
4. ✘ कपिल देव

Question Number : 198 Question Id : 7368155654 Question Type : MCQ Option Shuffling : Yes Display Question Number : Yes  
Single Line Question Option : No Option Orientation : Vertical

Correct : 1 Wrong : 0.25

The total number of player in a Kabaddi team is?

Options :

1. ✘ Ten

2. ✓ Seven
3. ✗ Eleven
4. ✗ Thirteen

Question Number : 198 Question Id : 7368155654 Question Type : MCQ Option Shuffling : Yes Display Question Number : Yes  
Single Line Question Option : No Option Orientation : Vertical

Correct : 1 Wrong : 0.25

एक कबड्डी टीम में कुल कितने खिलाड़ी होते हैं?

Options :

1. ✗ दस
2. ✓ सात
3. ✗ ग्यारह
4. ✗ तेरह

Question Number : 199 Question Id : 7368155655 Question Type : MCQ Option Shuffling : Yes Display Question Number : Yes  
Single Line Question Option : No Option Orientation : Vertical

Correct : 1 Wrong : 0.25

In which event Rajyavardhan Singh Rathore got silver medal in 2004 Summer Olympics held in Athens?

Options :

1. ✗ Gymnastics
2. ✗ Weight Lifting
3. ✗ Long Jump
4. ✓ Double Trap

Question Number : 199 Question Id : 7368155655 Question Type : MCQ Option Shuffling : Yes Display Question Number : Yes  
Single Line Question Option : No Option Orientation : Vertical

Correct : 1 Wrong : 0.25

वर्ष 2004 में, एथेन्स में आयोजित किये गए ग्रीष्मकालीन ओलम्पिक में कौन से खेल में राज्यवर्धन सिंह राठौड़ को रजत पदक मिला था?

Options :

1. ✗ जिम्नास्टिक्स
2. ✗ वेट लिफ्टिंग
3. ✗ लॉन्ग जंप
4. ✓ डबल ट्रैप

Question Number : 200 Question Id : 7368155656 Question Type : MCQ Option Shuffling : Yes Display Question Number : Yes  
Single Line Question Option : No Option Orientation : Vertical

Correct : 1 Wrong : 0.25

Who is the first Indian to Win All England Open Badminton Championship?

Options :

Latest Sarkari Jobs, Govt Exam Results,  
Vacancies and updates on one click

Know More



1. ✓ Prakash Padukone
2. ✗ Pullela Gopichand
3. ✗ Saina Nehwal
4. ✗ Gutta Jwala

Question Number : 200 Question Id : 7368155656 Question Type : MCQ Option Shuffling : Yes Display Question Number : Yes  
Single Line Question Option : No Option Orientation : Vertical

Correct : 1 Wrong : 0.25

‘ऑल इंग्लैंड ओपन बैडमिंटन चैम्पियनशिप’ को जीतने वाला पहला भारतीय कौन है?

Options :

1. ✓ प्रकाश पादुकोण
2. ✗ पुल्लेला गोपीचंद
3. ✗ साइना नेहवाल
4. ✗ गुट्टा ज्वाला

Prepp



# Latest Sarkari jobs, Govt Exam alerts, Results and Vacancies

- ▶ Latest News and Notification
- ▶ Exam Paper Analysis
- ▶ Topic-wise weightage
- ▶ Previous Year Papers with Answer Key
- ▶ Preparation Strategy & Subject-wise Books

To know more [Click Here](#)



[www.prepp.in](http://www.prepp.in)