

# Multi Tasking Non Technical Staff Havaladar CBIC and CBN Examination 2021

Roll Number	
Candidate Name	
Venue Name	Yagyavalkya Institute of Technology
Exam Date	19/07/2022
Exam Time	1:00 PM - 2:30 PM
Subject	MTS Non technical and Havaladar Examination 2021

Section : General English

**Q.1** Select the most appropriate **ANTONYM** of the given word.

Glad

- Ans  1. Cheery  
 2. Delighted  
 3. Gloomy  
 4. Joyous

Question ID : 26433050616

Status : Answered

Chosen Option : 3

**Q.2** Select the option that will improve the underlined part of the given sentence. In case no improvement is needed, select 'No improvement required'.

The novels of Jane Austen give us a a glimpse into the world of women.

- Ans  1. gave them the  
 2. given us a  
 3. gives us a  
 4. No improvement required

Question ID : 26433051724

Status : Answered

Chosen Option : 4

**Q.3** Parts of the following sentence have been given as options. One of them may contain an error. Select the part that contains the error from the given options. If you don't find any error, mark 'No error' as your answer.

Caramel is made from several thousand compounds, making it one of the much complex food products.

- Ans  1. Caramel is made from several  
 2. No error  
 3. thousand compounds, making it one of  
 4. the much complex food products

Question ID : 26433050630

Status : Answered

Chosen Option : 4

**Q.4** The following sentence has been divided into parts. One of them may contain an error. Select the part that contains the error from the given options. If you don't find any error, mark 'No error' as your answer.

It were so painful / to give up / my last hope.

- Ans  1. to give up  
 2. It were so painful  
 3. my last hope  
 4. No error

Question ID : 26433050602  
Status : Answered  
Chosen Option : 2

**Q.5** The following sentence has been divided into parts. One of them may contain an error. Select the part that contains the error from the given options. If you don't find any error, mark 'No error' as your answer.

Their are numerous / buildings outside our / school premises.

- Ans  1. school premises  
 2. buildings outside our  
 3. Their are numerous  
 4. No error

Question ID : 26433051471  
Status : Answered  
Chosen Option : 3

**Q.6** Select the most appropriate synonym of the given word.

**Bloom**

- Ans  1. Flower  
 2. Fade  
 3. Drop  
 4. Wither

Question ID : 26433050618  
Status : Answered  
Chosen Option : 1

**Q.7** Select the option that will improve the underlined part of the given sentence. In case no improvement is needed, select 'No improvement required'.

Drink a mixture of wormwood oil and olive oil to got rid of worms.

- Ans  1. No improvement required  
 2. to rid off  
 3. to getting rid by  
 4. to get rid of

Question ID : 26433050962  
Status : Answered  
Chosen Option : 4

Q.8 Select the most appropriate meaning of the given idiom.

A piece of cake

- Ans  1. A hidden enemy  
 2. A dangerous situation  
 3. A very easy task  
 4. A thoughtful mind

Question ID : 26433050568  
Status : Answered  
Chosen Option : 3

Q.9 Select the most appropriate meaning of the given idiom.

Drop in the bucket

- Ans  1. An extreme overreaction to something very small or insignificant  
 2. To be involved in or be a part of something great or revolutionary  
 3. Something small and unimportant, especially when compared with something else  
 4. An alarming or unexpected announcement, especially an unpleasant one

Question ID : 26433051204  
Status : Answered  
Chosen Option : 3

Q.10 Select the option that can be used as a one-word substitute for the given group of words.

A non-professional who is inept at a particular activity

- Ans  1. Expert  
 2. Amateur  
 3. Director  
 4. Fatalist

Question ID : 26433051171  
Status : Answered  
Chosen Option : 2

Q.11 Select the most appropriate ANTONYM of the underlined word.

Strenuous exercise can result in muscle pain.

- Ans  1. Irksome  
 2. Impelling  
 3. Aggressive  
 4. Effortless

Question ID : 26433050990  
Status : Answered  
Chosen Option : 4

Q.12 Select the most appropriate ANTONYM of the given word.

Relapse

- Ans  1. Warrant  
 2. Improve  
 3. Pine  
 4. Validate

Question ID : 26433051227  
Status : Answered  
Chosen Option : 2

Q.13 Select the option that can be used as a one-word substitute for the given group of words.

Having a common centre, as circles or spheres

- Ans  1. Cylindrical  
 2. Concentric  
 3. Elliptical  
 4. Centrifugal

Question ID : 26433051484  
Status : Answered  
Chosen Option : 2

Q.14 Select the most appropriate option to fill in the blank.

Please sit down and have breakfast \_\_\_\_\_ us.

- Ans  1. with  
 2. to  
 3. at  
 4. on

Question ID : 26433050770  
Status : Answered  
Chosen Option : 1

Q.15 Select the most appropriate synonym of the underlined word in the given sentence.

My most vivid recollection of last summer is the ocean.

- Ans  1. vague  
 2. composed  
 3. lucid  
 4. blurry

Question ID : 26433050784  
Status : Answered  
Chosen Option : 3

**Q.16** Select the option that will improve the underlined part of the sentence. In case no improvement is needed, select 'No improvement required'.

Both of mine child passed the examination successfully.

- Ans  1. my children passed  
 2. our children passes  
 3. No improvement required  
 4. my child pass

Question ID : 26433050510  
Status : Answered  
Chosen Option : 1

**Q.17** Select the correctly spelt word.

- Ans  1. Precursor  
 2. Acknowledge  
 3. Religiosity  
 4. Anceistors

Question ID : 26433051492  
Status : Answered  
Chosen Option : 2

**Q.18** Select the option that can be used as a one-word substitute for the given group of words.

One who can use either hand with ease

- Ans  1. Gregarious  
 2. Virtuoso  
 3. Pedantic  
 4. Ambidextrous

Question ID : 26433050571  
Status : Answered  
Chosen Option : 4

**Q.19** Select the correctly spelt word.

- Ans  1. Continent  
 2. Contient  
 3. Contenant  
 4. Conttinent

Question ID : 26433050624  
Status : Answered  
Chosen Option : 1

**Q.20** Select the option that will improve the underlined part of the sentence. In case no improvement is needed, select 'No improvement required'.

Bring me the finest dress from an finest shop.

Ans  1. from the finest

2. of the finer

3. No improvement required

4. through a finer

Question ID : 26433051064

Status : Answered

Chosen Option : 1

**Comprehension:**

In the following passage, some words have been deleted. Read the passage carefully and select the most appropriate option to fill in each blank.

Latin may be the language that we (1) \_\_\_\_\_ with the Roman Empire, but the question of (2) \_\_\_\_\_ the Romans spoke Latin or not (3) \_\_\_\_\_ not have a simple answer. Rome grew from a tiny community in the middle of a culturally diverse peninsula into an empire that reached (4) \_\_\_\_\_ Britain to Syria. As Rome's power spread, Romans also interacted with (5) \_\_\_\_\_ of dozens of other languages

**SubQuestion No : 21**

**Q.21** Select the most appropriate option to fill in blank number 1.

Ans  1. delink

2. remind

3. associate

4. imply

Question ID : 26433050773

Status : Answered

Chosen Option : 3

**Comprehension:**

In the following passage, some words have been deleted. Read the passage carefully and select the most appropriate option to fill in each blank.

Latin may be the language that we (1) \_\_\_\_\_ with the Roman Empire, but the question of (2) \_\_\_\_\_ the Romans spoke Latin or not (3) \_\_\_\_\_ not have a simple answer. Rome grew from a tiny community in the middle of a culturally diverse peninsula into an empire that reached (4) \_\_\_\_\_ Britain to Syria. As Rome's power spread, Romans also interacted with (5) \_\_\_\_\_ of dozens of other languages

**SubQuestion No : 22**

**Q.22** Select the most appropriate option to fill in blank number 2.

Ans  1. whether

2. did

3. do

4. either

Question ID : 26433050774

Status : Answered

Chosen Option : 1

**Comprehension:**

In the following passage, some words have been deleted. Read the passage carefully and select the most appropriate option to fill in each blank.

Latin may be the language that we (1) \_\_\_\_\_ with the Roman Empire, but the question of (2) \_\_\_\_\_ the Romans spoke Latin or not (3) \_\_\_\_\_ not have a simple answer. Rome grew from a tiny community in the middle of a culturally diverse peninsula into an empire that reached (4) \_\_\_\_\_ Britain to Syria. As Rome's power spread, Romans also interacted with (5) \_\_\_\_\_ of dozens of other languages

**SubQuestion No : 23**

**Q.23 Select the most appropriate option to fill in blank number 3.**

- Ans  1. do  
 2. should  
 3. does  
 4. done

Question ID : 26433050775

Status : Answered

Chosen Option : 3

**Comprehension:**

In the following passage, some words have been deleted. Read the passage carefully and select the most appropriate option to fill in each blank.

Latin may be the language that we (1) \_\_\_\_\_ with the Roman Empire, but the question of (2) \_\_\_\_\_ the Romans spoke Latin or not (3) \_\_\_\_\_ not have a simple answer. Rome grew from a tiny community in the middle of a culturally diverse peninsula into an empire that reached (4) \_\_\_\_\_ Britain to Syria. As Rome's power spread, Romans also interacted with (5) \_\_\_\_\_ of dozens of other languages

**SubQuestion No : 24**

**Q.24 Select the most appropriate option to fill in blank number 4.**

- Ans  1. both  
 2. of  
 3. between  
 4. from

Question ID : 26433050776

Status : Answered

Chosen Option : 4

**Comprehension:**

In the following passage, some words have been deleted. Read the passage carefully and select the most appropriate option to fill in each blank.

Latin may be the language that we (1) \_\_\_\_\_ with the Roman Empire, but the question of (2) \_\_\_\_\_ the Romans spoke Latin or not (3) \_\_\_\_\_ not have a simple answer. Rome grew from a tiny community in the middle of a culturally diverse peninsula into an empire that reached (4) \_\_\_\_\_ Britain to Syria. As Rome's power spread, Romans also interacted with (5) \_\_\_\_\_ of dozens of other languages

**SubQuestion No : 25**

**Q.25 Select the most appropriate option to fill in blank number 5.**

- Ans  1. capitals  
 2. speakers  
 3. principals  
 4. sleepers

Question ID : 26433050777  
Status : Answered  
Chosen Option : 2

Section : **General Intelligence and Reasoning**

**Q.1 Select the option that is related to the fourth number in the same way as the first number is related to the second number and the fifth number is related to the sixth number.**

7: 42 :: ? : 110 :: 9 : 72

- Ans  1. 8  
 2. 6  
 3. 12  
 4. 11

Question ID : 26433048008  
Status : Answered  
Chosen Option : 4

**Q.2 Select the set in which the numbers are related in the same way as are the numbers of the following sets.**

(16, 4, 8)  
(12, 2, 12)

- Ans  1. (20, 2, 8)  
 2. (18, 8, 3)  
 3. (28, 7, 8)  
 4. (32, 3, 10)

Question ID : 26433048159  
Status : Answered  
Chosen Option : 3



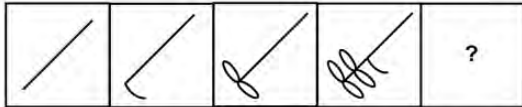
**Q.3** Select the option that is related to the fifth letter-cluster in the same way as the second letter-cluster is related to the first letter-cluster and the fourth letter-cluster is related to the third letter-cluster.

**GOOD : CKKZ :: BEST : XAOP :: COOL : ?**

- Ans**
- 1. YJJH
  - 2. WKKH
  - 3. YKKI
  - 4. YKKH

Question ID : 26433047921  
Status : Answered  
Chosen Option : 4

**Q.4** Select the figure from among the given options that can replace the question mark (?) in the following series.



**Ans**

- 1.
- 2.
- 3.
- 4.

Question ID : 26433048012  
Status : Answered  
Chosen Option : 4

**Q.5** In a certain code language, 'Homonym is antonym' is coded as '# kr pg', and 'Antonym are synonym' is coded as 'lm pg 6'. What is the code for 'Antonym' in that language?

- Ans  1. #  
 2. kr  
 3. lm  
 4. pg

Question ID : 26433048646  
Status : Answered  
Chosen Option : 4

**Q.6** Select the letter from among the given options that can replace the question mark (?) in the following series.

D, F, I, ?, R, X

- Ans  1. O  
 2. M  
 3. L  
 4. N

Question ID : 26433047993  
Status : Answered  
Chosen Option : 2

**Q.7** Among seven sisters Anu, Barsha, Champa, Disha, Emma, Farheen and Geeta; Barsha is elder than only four other sisters. Champa is elder than Disha. Anu is elder than Farheen. Emma is elder than one person only, that is Geeta, who is the youngest among all sisters. Barsha is elder than Anu. Given that no two sisters have the same age, find out who is the eldest sister.

- Ans  1. Champa  
 2. Disha  
 3. Farheen  
 4. Anu

Question ID : 26433048028  
Status : Answered  
Chosen Option : 1

**Q.8** Select the option that is related to the third letter-cluster in the same way as the second letter-cluster is related to the first letter-cluster.

RO : WJ :: PJ : ?

- Ans  1. UF  
 2. VF  
 3. VE  
 4. UE

Question ID : 26433048650  
Status : Answered  
Chosen Option : 4

**Q.9** Select the number from among the given options that can replace the question mark (?) in the following series.

425, 442, 459, 476, ?

Ans  1. 482

2. 503

3. 493

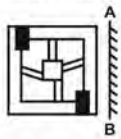
4. 498

Question ID : 26433048031

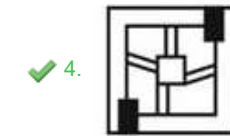
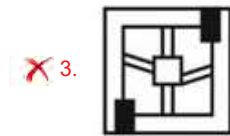
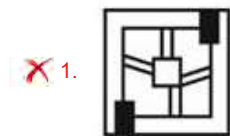
Status : Answered

Chosen Option : 3

**Q.10** Select the correct mirror image of the given figure when the mirror is placed at the right side.



Ans

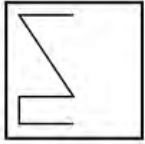


Question ID : 26433048786

Status : Answered

Chosen Option : 4

Q.11 Select the option in which the given figure is embedded (rotation is NOT allowed).

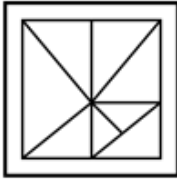


Ans

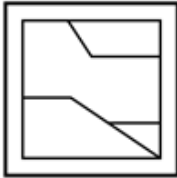
1.



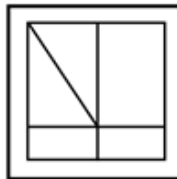
2.



3.



4.



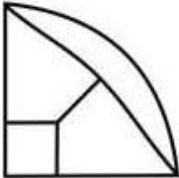
Question ID : 26433048164  
Status : Answered  
Chosen Option : 4

**Q.12** Select the option that can replace the question mark (?) in the given figure and complete the pattern.

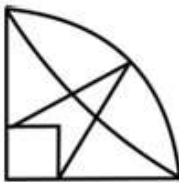


**Ans**

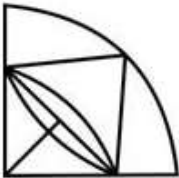
1.



2.



3.



4.



Question ID : 26433048342

Status : Answered

Chosen Option : 2

**Q.13** In a certain code language, 'ROMKSG' is written as 'SQPJQD', and 'PNDABC' is written as 'QPGZZZ'. How will 'QJLMTF' be written in that language?

**Ans**  1. RLOLSC

2. RLLORC

3. RLLOSC

4. RLOLRC

Question ID : 26433048997

Status : Answered

Chosen Option : 4

Q.14 Four boys A, R, K and M are sitting in a row facing the North (but not necessarily in the same order) and four girls P, Q, L and B are sitting in a row facing these boys (but not necessarily in the same order). B is second to the right of P. K and A are at the ends. P is at one of the ends. K is at the left end of the row. One boy is sitting between A and R.

If Q is at one of the ends, then who is L facing?

Ans  1. K

2. M

3. A

4. R

Question ID : 26433048855

Status : Answered

Chosen Option : 4

Q.15 What will come in the place of '?' in the following equation, if '+' and '-' are interchanged and also 'x' and '÷' are interchanged?

$$42 + 10 \times 5 - 9 \div 1 = ?$$

Ans  1. 38

2. 49

3. 44

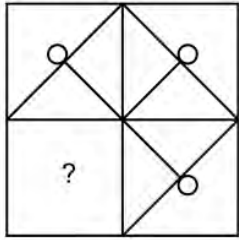
4. 31

Question ID : 26433048035

Status : Answered

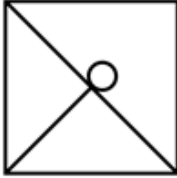
Chosen Option : 4

**Q.16** Select the figure from the options that can replace the question mark (?) and complete the pattern.

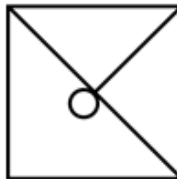


**Ans**

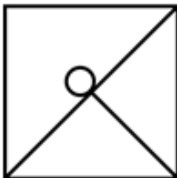
1.



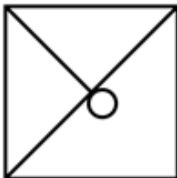
2.



3.



4.



Question ID : 26433048192

Status : Answered

Chosen Option : 2

**Q.17** Read the given statements and conclusions carefully. Assuming that the information given in the statements is true, even if it appears to be at variance with commonly known facts, decide which of the given conclusions logically follow(s) from the statements.

**Statement I:** All black are green and no green is red.

**Statement II:** All red are pink.

**Conclusion I:** All black are pink.

**Conclusion II:** Some green are pink.

**Ans**  1. Only conclusion II follows.

2. Neither conclusion I nor II follow.

3. Only conclusion I follows.

4. Both conclusions I and II follow.

Question ID : 26433048005

Status : Answered

Chosen Option : 2

Q.18 In a certain code language, '524' means 'are you fine', '785' means 'you come home' and '6271' means 'we are at home'. What is the code for 'come home' in the same language?

- Ans
- 1. 28
  - 2. 91
  - 3. 87
  - 4. 54

Question ID : 26433047924  
Status : Answered  
Chosen Option : 3

Q.19 In a certain code language, 'WORLD' is written as 'CUXRJ' and 'SMOKE' is written as 'YSUQK'. How will 'INDIA' be written in that language?

- Ans
- 1. OSJOG
  - 2. OTKOG
  - 3. OTJOG
  - 4. OTJOH

Question ID : 26433047925  
Status : Answered  
Chosen Option : 3

Q.20 Read the given statements and conclusions carefully. Assuming that the information given in the statements is true, even if it appears to be at variance with commonly known facts, decide which of the given conclusions logically follow(s) from the statements.

Statement I: All leopards are cheetahs.  
Statement II: No cheetah is a cat.

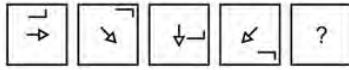
Conclusion I: Some cats are leopards.  
Conclusion II: Some cats are cheetahs.

- Ans
- 1. Only conclusion II follows.
  - 2. Neither conclusion I nor II follows.
  - 3. Only conclusion I follows.
  - 4. Both conclusions I and II follow.

Question ID : 26433048154  
Status : Answered  
Chosen Option : 2



Q.21 Select the figure from the given options that can replace the question mark (?) in the following series.



Ans

✓ 1.



✗ 2.



✗ 3.



✗ 4.



Question ID : 26433048859

Status : Answered

Chosen Option : 1

Q.22 What will come in the place of '?' in the following equation, if '+' and 'x' are interchanged and also '-' and '÷' are interchanged?

$$42 + 6 - 3 \times 15 \div 5 = ?$$

Ans ✓ 1. 94

✗ 2. 85

✗ 3. 63

✗ 4. 74

Question ID : 26433048011

Status : Answered

Chosen Option : 1

Q.23 Seven people Pravin, Rahul, Shikhar, Tirtha, Uday, Vinay, and Wasim are sitting in a straight row facing North. Rahul is sitting second left to Tirtha. Tirtha is sitting third left to Wasim. Rahul and Shikhar are not sitting at either of the corners. Uday is the immediate neighbour of Vinay. Vinay is sitting second left from the right corner. Who is sitting to the immediate left of Rahul?

Ans ✗ 1. Uday

✗ 2. Tirtha

✗ 3. Vinay

✓ 4. Pravin

Question ID : 26433048027

Status : Answered

Chosen Option : 4

**Q.24** Select the number from the given options that can replace the question mark (?) in the following series.

13, 17, 19, 23, 29, ?

- Ans
- 1. 53
  - 2. 37
  - 3. 31
  - 4. 43

Question ID : 26433048843  
Status : Answered  
Chosen Option : 3

**Q.25** Select the option that is related to the fifth term in the same way as the second term is related to the first term and the fourth term is related to the third term.

ACID : IDAC :: CAMP : MPCA :: TRAY : ?

- Ans
- 1. AYRT
  - 2. YRTA
  - 3. ARTY
  - 4. AYTR

Question ID : 26433047995  
Status : Answered  
Chosen Option : 4

Section : Numerical Aptitude

**Q.1** The circumference of a circle is equal to the perimeter of an equilateral triangle. If the radius of the circle is 84 cm, then what will be the length of each side of the equilateral triangle? [Use  $\pi = \frac{22}{7}$ ]

- Ans
- 1. 192 cm
  - 2. 176 cm
  - 3. 172 cm
  - 4. 184 cm

Question ID : 26433049935  
Status : Answered  
Chosen Option : 1

**Q.2** If the salary of A is 12% more than that of B, then by what percentage is the salary of B less than that of A? [Give your answer correct to 1 place of decimal.]

- Ans
- 1. 13.7%
  - 2. 12.7%
  - 3. 11.7%
  - 4. 10.7%

Question ID : 26433049299  
Status : Answered  
Chosen Option : 4

**Q.3** To make a certain journey, a distance of 10 km is travelled on foot in 3 hours, a distance of 120 km is travelled by car in 3 hours, and a distance of 70 km is travelled by scooter in 4 hours. What is the average speed of the total journey?

- Ans**
- 1. 50 km/h
  - 2. 35 km/h
  - 3. 45 km/h
  - 4. 20 km/h

Question ID : 26433049384  
Status : Answered  
Chosen Option : 4

**Q.4** What is the LCM of the fractions  $(\frac{2}{3})$ ,  $(\frac{8}{15})$  and  $(\frac{4}{27})$ ?

- Ans**
- 1.  $\frac{8}{3}$
  - 2.  $\frac{12}{5}$
  - 3.  $\frac{3}{8}$
  - 4.  $\frac{24}{7}$

Question ID : 26433049495  
Status : Answered  
Chosen Option : 1

**Q.5** What is the value of  $[1000 + 300 - \{500 \div 5 + 100\} \times 4]$ ?

- Ans**
- 1. 400
  - 2. 800
  - 3. 500
  - 4. 1300

Question ID : 26433049344  
Status : Answered  
Chosen Option : 3

**Q.6**  $B_1$  and  $B_2$  can do a piece of work together in 8 days,  $B_2$  and  $B_3$  can do the same work together in 16 days, while  $B_1$  and  $B_3$  can do it together in 32 days. What percentage of the total work can all the 3 people, working together, do in 4 days?

- Ans**
- 1. 43.75%
  - 2. 40.75%
  - 3. 38.5%
  - 4. 41.25%

Question ID : 26433049894  
Status : Answered  
Chosen Option : 4

**Q.7** The difference between the compound interest and simple interest on a sum of ₹2,500 for 2 years is ₹100. Find the rate of interest per annum, if the nominal rate of interest per annum is the same for both simple and compound interest, and in the case of compound interest, the interest is compounded annually.

- Ans**
- 1. 40%
  - 2. 25%
  - 3. 20%
  - 4. 12%

Question ID : 26433049507  
Status : Answered  
Chosen Option : 4

**Q.8** X and Y, working together, can complete a work in 30 days, Y and Z, working together, can complete the same work in 40 days, and Z and X, working together, can complete the same work in 24 days. In how many days can X, Y and Z, working together, complete the work?

- Ans**
- 1. 10 days
  - 2. 5 days
  - 3. 15 days
  - 4. 20 days

Question ID : 26433049361  
Status : Answered  
Chosen Option : 4

**Q.9** The ratio of three numbers is  $\frac{1}{4} : \frac{5}{6} : \frac{1}{3}$  respectively. If the sum of the numbers is 68, what is the value of  $\frac{1}{3}$  of the first number?

- Ans**
- 1. 6
  - 2. 8
  - 3. 2
  - 4. 4

Question ID : 26433050179  
Status : Not Attempted and Marked For Review  
Chosen Option : --

**Q.10** If an electricity bill is paid before the due date, one gets a reduction of 2 per cent on the amount of the bill. By paying the bill before the due date, Rajiv got a reduction of ₹40 and Ravina got a reduction of ₹80. What is the sum of the electricity bills of Rajiv and Ravina?

- Ans**
- 1. ₹4,000
  - 2. ₹2,000
  - 3. ₹6,000
  - 4. ₹8,000

Question ID : 26433049353  
Status : Answered  
Chosen Option : 3

Q.11 The value of  $\frac{1}{27}$  of 3375 + 44% of 2775 is:

- Ans
- 1. 1342
  - 2. 1349
  - 3. 1346
  - 4. 1351

Question ID : 26433050169  
Status : Answered  
Chosen Option : 3

Q.12 The following table shows the number of flowers of different colours in a garden.

Colour of flower	Number of flowers
Pink	4
Purple	6
Blue	7
Red	3
Yellow	8

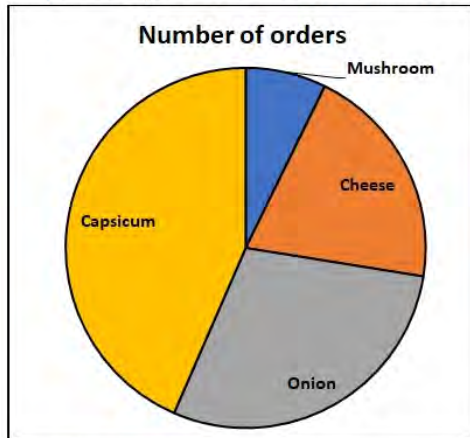
What is the total number of flowers in the garden, except the blue-coloured ones?

- Ans
- 1. 21
  - 2. 22
  - 3. 20
  - 4. 28

Question ID : 26433049387  
Status : Answered  
Chosen Option : 1

**Q.13** Study the given pie-chart and answer the question that follows.

The pie-chart represents the shares of the number of different flavours of pizzas sold on a random day.



[Figure is drawn to scale.]

Which flavour of pizza is the most ordered one?

- Ans
- 1. Capsicum
  - 2. Onion
  - 3. Mushroom
  - 4. Cheese

Question ID : 26433049364  
Status : Answered  
Chosen Option : 1

**Q.14** In a town, 80% of the population are adults, of which the population of men and women is in the ratio 2 : 3. If the number of adult men is 1.2 lakh, what is the total population of the town?

- Ans
- 1. 2 lakh
  - 2. 3 lakh
  - 3. 1.5 lakh
  - 4. 3.75 lakh

Question ID : 26433049379  
Status : Answered  
Chosen Option : 4

**Q.15** The following pie chart gives the central angles of the various sectors representing the number of employees in different departments in a company.



The number of employees in the marketing department is what percentage of the number of employees in all the departments taken together?

- Ans**
- 1. 50%
  - 2. 12.5%
  - 3. 20%
  - 4. 25%

Question ID : 26433050188  
Status : Answered  
Chosen Option : 4

**Q.16** If the adjacent sides of a rectangle, whose perimeter is 66 m, are in the ratio 5 : 6, then what will be the area of the rectangle?

- Ans**
- 1. 270 m<sup>2</sup>
  - 2. 160 m<sup>2</sup>
  - 3. 230 m<sup>2</sup>
  - 4. 180 m<sup>2</sup>

Question ID : 26433049365  
Status : Answered  
Chosen Option : 2

**Q.17** What will be the average of all the even numbers between 11 and 27?

- Ans**
- 1. 20
  - 2. 17.5
  - 3. 19
  - 4. 18

Question ID : 26433049927  
Status : Answered  
Chosen Option : 3

Q.18 In what time will ₹13,000 lent at 4 per cent per annum on simple interest amount to ₹13,780?

- Ans
- 1. 1 year 6 months
  - 2. 2 years 6 months
  - 3. 2 years 3 months
  - 4. 1 year 5 months

Question ID : 26433049356  
Status : Answered  
Chosen Option : 4

Q.19 The lengths of the diagonals of a rhombus are 16 cm and 30 cm, respectively. What is the perimeter of the rhombus?

- Ans
- 1. 68 cm
  - 2. 76 cm
  - 3. 72 cm
  - 4. 80 cm

Question ID : 26433049710  
Status : Not Attempted and Marked For Review  
Chosen Option : --

Q.20 The price of tomato increases by 10%. The consumption of tomato decreases by 15%. What is the percentage change in the expenditure on tomatoes?

- Ans
- 1. 8% decrease
  - 2. 7.5% decrease
  - 3. 6.5% decrease
  - 4. 7% decrease

Question ID : 26433049901  
Status : Answered  
Chosen Option : 3

Q.21 A milkman purchases milk at ₹a' per litre and sells it at ₹1.5a per litre. Still he mixes 2 litres water with every 9 litres of pure milk. What is his profit percentage?

- Ans
- 1.  $\frac{250}{3}\%$
  - 2.  $\frac{328}{9}\%$
  - 3.  $\frac{789}{5}\%$
  - 4.  $\frac{1000}{3}\%$

Question ID : 26433049352  
Status : Answered  
Chosen Option : 2



**Q.22** A train 200 m long running, at a speed of 36 km/h, takes 55 seconds to cross a bridge completely. What is the length of the bridge?

- Ans**
- 1. 300 m
  - 2. 375 m
  - 3. 350 m
  - 4. 320 m

Question ID : 26433050183

Status : **Not Attempted and Marked For Review**

Chosen Option : --

**Q.23** Visitors to a show were charged ₹10 each on the first day, ₹5 on the second day and ₹2 on the third day and the total attendance on the three days was in the ratio 15 : 2 : 3. What is the average charge per person for the visitors to the show on the three days taken together?

- Ans**
- 1. ₹8.30
  - 2. ₹6.80
  - 3. ₹7.50
  - 4. ₹20.00

Question ID : 26433049348

Status : **Answered**

Chosen Option : 1

**Q.24** By selling 120 mangoes, a shopkeeper gains the selling price of 20 mangoes. Find his profit percentage.

- Ans**
- 1. 20%
  - 2. 25%
  - 3. 10%
  - 4. 12%

Question ID : 26433049501

Status : **Answered**

Chosen Option : 1

**Q.25** The average of a set of fifteen numbers is 12. If 7 is added to each of the numbers in the given set, then what will be the new average?

- Ans**
- 1. 84
  - 2. 105
  - 3. 19
  - 4. 22

Question ID : 26433049702

Status : **Answered**

Chosen Option : 4

**Q.1** What is a common term used to measure poverty based on the income or consumption levels?

- Ans
- 1. Vulnerability
  - 2. Social exclusion
  - 3. Poverty line
  - 4. Poverty estimates

Question ID : 26433047104  
Status : Answered  
Chosen Option : 3

**Q.2** In which of the following states is the Panna National Park located?

- Ans
- 1. Odisha
  - 2. Madhya Pradesh
  - 3. Tamil Nadu
  - 4. Meghalaya

Question ID : 26433046750  
Status : Answered  
Chosen Option : 2

**Q.3** As announced in the Union Budget of FY 2022, how many pilot projects are to be set up for coal gasification?

- Ans
- 1. 4
  - 2. 8
  - 3. 2
  - 4. 6

Question ID : 26433046767  
Status : Answered  
Chosen Option : 1

**Q.4** Which of the following pairs of autobiography and its author is INCORRECT?

- Ans
- 1. Unbreakable - Mary Kom
  - 2. The Test of My Life - Kapil Dev
  - 3. Playing It My Way - Sachin Tendulkar
  - 4. Ace Against Odds - Sania Mirza

Question ID : 26433046760  
Status : Answered  
Chosen Option : 2

**Q.5 India won eight Olympic gold medals in which sport till 2020?**

- Ans  1. Boxing  
 2. 10m air rifle  
 3. Wrestling  
 4. Field hockey

Question ID : 26433046715  
Status : Answered  
Chosen Option : 4

**Q.6 Who launched the International Air Connectivity Scheme (IACS) in 2022?**

- Ans  1. Sachin Pilot  
 2. Jyotiraditya Scindia  
 3. Amit Shah  
 4. Suresh Prabhu

Question ID : 26433046893  
Status : Answered  
Chosen Option : 2

**Q.7 The Moatsu Festival is a time of great rejoicing as the planting season comes to an end. It is celebrated by the Ao tribes of \_\_\_\_\_.**

- Ans  1. Manipal  
 2. Meghalaya  
 3. Arunachal Pradesh  
 4. Nagaland

Question ID : 26433046771  
Status : Answered  
Chosen Option : 1

**Q.8 \_\_\_\_\_ धातुओं का वह गुण है जिसके कारण उन्हें खींचकर पतले तार बनाए जा सकते हैं।**

- Ans  1. आघातवर्धनीयता  
 2. वाहकता  
 3. परिष्करण  
 4. तन्यता

Question ID : 26433046773  
Status : Answered  
Chosen Option : 4

**Q.9** No person can disrespect the National flag, Constitution of India and the National Anthem under the \_\_\_\_\_ Act.

- Ans**
- 1. Factoring Regulation
  - 2. Armed Forces Tribunal
  - 3. Prevention of Insults to National Honour
  - 4. Whistle Blowers Protection

Question ID : 26433046913  
Status : Answered  
Chosen Option : 3

**Q.10** In which year did Mahatma Gandhi lead the Champaran movement against the indigo planters?

- Ans**
- 1. 1915
  - 2. 1918
  - 3. 1917
  - 4. 1916

Question ID : 26433047584  
Status : Answered  
Chosen Option : 3

**Q.11** Rukmini Devi Arundale was associated with which classical dance of India?

- Ans**
- 1. Sattriya
  - 2. Kathak
  - 3. Bharatanatyam
  - 4. Kuchipudi

Question ID : 26433047570  
Status : Answered  
Chosen Option : 3

**Q.12** The number of deaths per thousand persons in a year is known as \_\_\_\_\_.

- Ans**
- 1. gross reproduction rate
  - 2. crude rate
  - 3. birth rate
  - 4. death rate

Question ID : 26433047329  
Status : Answered  
Chosen Option : 4

Q.13 A traditional basketball team has 12 players, with \_\_\_\_\_ basketball players on the court at any given time.

- Ans  1. 7  
 2. 4  
 3. 6  
 4. 5

Question ID : 26433047316  
Status : Answered  
Chosen Option : 1

Q.14 Which state is the leading producer of cotton in India, as of April 2022?

- Ans  1. Gujarat  
 2. Telangana  
 3. Karnataka  
 4. Madhya Pradesh

Question ID : 26433046902  
Status : Answered  
Chosen Option : 1

Q.15 Which of the following statements is correct about endoplasmic reticulum?

- I. It is a large network of membrane-bound tubes and sheets.  
II. It is similar in structure to the plasma membrane.

- Ans  1. Only I  
 2. Only II  
 3. Neither I nor II  
 4. Both I and II

Question ID : 26433047575  
Status : Answered  
Chosen Option : 4

Q.16 \_\_\_\_\_ was the capital of the Pandya dynasty.

- Ans  1. Madurai  
 2. Karur  
 3. Uraiyur  
 4. Delhi

Question ID : 26433046907  
Status : Answered  
Chosen Option : 1

Q.17 Brihadeshwara temple at Thanjavur is one of the largest temples in India and is an example of Dravidian architecture during the \_\_\_\_\_ period.

- Ans  1. Chera  
 2. Chola  
 3. Hoysala  
 4. Pandya

Question ID : 26433046897  
Status : Answered  
Chosen Option : 2

Q.18 Who among the following Gupta rulers is known as the 'Napoleon of India'?

- Ans  1. Vishnugupta  
 2. Skandagupta  
 3. Samudragupta  
 4. Chandragupta I

Question ID : 26433046756  
Status : Answered  
Chosen Option : 3

Q.19 Who among the following was the first Indian to be selected to the British 'House of Commons' on a Liberal Party ticket?

- Ans  1. Chandra Shekhar Azad  
 2. Dadabhai Naoroji  
 3. Bhimrao Ramji Ambedkar  
 4. Bhagat Singh

Question ID : 26433046758  
Status : Answered  
Chosen Option : 2

Q.20 The largest ocean on Earth is \_\_\_\_\_.

- Ans  1. Arctic Ocean  
 2. Pacific Ocean  
 3. Atlantic Ocean  
 4. Indian Ocean

Question ID : 26433046901  
Status : Answered  
Chosen Option : 2

Q.21 To become a member of Rajya Sabha, a person should be a citizen of India and at least \_\_\_\_\_ of age.

Ans  1. 30 years

2. 35 years

3. 28 years

4. 32 years

Question ID : 26433046764

Status : Answered

Chosen Option : 1

Q.22 His compositions for blockbusters such as Silsila and Chandni are a manifestation of his musical brilliance. Who is he?

Ans  1. Ustad Bismillah Khan

2. Pandit Shivkumar Sharma

3. Ustad Zakir Hussain

4. Jagjit Singh

Question ID : 26433046761

Status : Answered

Chosen Option : 4

Q.23 निम्नलिखित में से कौन महानदी की एक सहायक नदी नहीं है?

Ans  1. इन्द्रावती

2. शिवनाथ

3. हसदेव

4. तेलन

Question ID : 26433046753

Status : Answered

Chosen Option : 1

Q.24 निम्नलिखित में से कौन वर्ल्ड कोरियोग्राफी अवार्ड 2020 जीतने वाले/ली पहले/ली भारतीय थे/थीं?

Ans  1. रेमो डिस्ज़ा

2. अपर्णा सतीसन

3. सुरेश मुकुंद

4. बॉस्को-सीजर

Question ID : 26433046762

Status : Answered

Chosen Option : 1

**Q.25** Who among the following is India's richest person as of 6 April 2022?

**Ans**  1. Mukesh Ambani

2. Cyrus Poonawalla

3. Shiv Nadar

4. Gautam Adani

Question ID : **26433046744**

Status : **Answered**

Chosen Option : **4**