












Practice, Learn and Achieve
Your Goal with Prepp

RRB Group D Exam

Previous Year Paper

Simplifying
Government Exams

 SSC CHSL	 IAS EXAM	 RRB NTPC	 NTSE	 CDS
 SSC CGL	 CBSE UGC NET	 IBPS PO	 NDA	
 SBI PO	 IBPS CLERK	 AFCAT	 SSC JE	 CTET
 CSIR UGC NET	 CAPF	 IBPS RRB		

www.prepp.in



RAILWAY RECRUITMENT BOARDS

रेलवे भर्ती बोर्ड

Level-1 Posts CEN-02/2018

Participant ID:	112022096270005
Participants Name:	VISHAL AMBEDKAR
Test Center Name:	Shubhash Chandra Bose Academy Inter College
Test Date:	25/09/2018
Test Time:	9:00 AM - 10:30 AM
Subject:	Level 1

- Options shown in green color with a tick icon are correct
- Chosen option on top right of the question indicates the option selected by the candidate
- The numbers indicated against the Question ID and Option ID are the numbers to be noted and used for raising objections

Q.1 The salivary gland secretes _____ enzyme.

- Ans
- 1. amylase
 - 2. lipase
 - 3. pepsin
 - 4. trypsin

Question ID : 6913521578
Option 1 ID : 6913526309
Option 2 ID : 6913526310
Option 3 ID : 6913526311
Option 4 ID : 6913526312
Status : Not Answered
Chosen Option : --

Q.2 The famous football player Maradona belongs to which among the following countries?

- Ans
- 1. Mexico
 - 2. Ireland
 - 3. Argentina
 - 4. Germany

Question ID : 6913521582
Option 1 ID : 6913526327
Option 2 ID : 6913526328
Option 3 ID : 6913526325
Option 4 ID : 6913526326
Status : Answered
Chosen Option : 3

Q.3 The average salary of male employees in a firm is ₹ 5200 and that of females is ₹ 4200. The mean salary of all the employees is ₹ 5000. The percentage of male employees in that firm is:

- Ans
- 1. 20%
 - 2. 60%
 - 3. 40%
 - 4. 80%

Question ID : 6913521522
Option 1 ID : 6913526085
Option 2 ID : 6913526087
Option 3 ID : 6913526086
Option 4 ID : 6913526088
Status : Answered
Chosen Option : 4

Q.4 If NOT is coded as 141520, then what is the code for EMBLEM?

- Ans
- 1. 513312513
 - 2. 513212514
 - 3. 523212513
 - 4. 513212513

Question ID : 6913521531
Option 1 ID : 6913526123
Option 2 ID : 6913526122
Option 3 ID : 6913526124
Option 4 ID : 6913526121
Status : Answered
Chosen Option : 4

Q.5 Who among the following won the 2017 World Rapid Chess Championship?

- Ans
- 1. Vladimeer Fedoseev
 - 2. Viswanathan Anand
 - 3. Ian Nepomniachtchi
 - 4. Kutwal Magnus Carlsen

Question ID : 6913521581
Option 1 ID : 6913526321
Option 2 ID : 6913526324
Option 3 ID : 6913526322
Option 4 ID : 6913526323
Status : Not Answered
Chosen Option : --

Q.6 An object of mass 30 kg is moving with a uniform velocity of 5 ms^{-1} . What is the kinetic energy possessed by the object?

- Ans
- 1. 375 N
 - 2. 375 kg ms^{-1}
 - 3. 375 J
 - 4. 375 Pa

Question ID : 6913521560

Option 1 ID : 6913526237
Option 2 ID : 6913526240
Option 3 ID : 6913526238
Option 4 ID : 6913526239
Status : Answered
Chosen Option : 3

Q.7 $0.02\overline{36}$, written as a vulgar fraction in its simplest form, is equal to:

- Ans
- 1. $\frac{13}{550}$
 - 2. $\frac{13}{3300}$
 - 3. $\frac{13}{1100}$
 - 4. $\frac{13}{9999}$

Question ID : 6913521505
Option 1 ID : 6913526018
Option 2 ID : 6913526017
Option 3 ID : 6913526019
Option 4 ID : 6913526020
Status : Not Attempted and Marked For Review
Chosen Option : --

Q.8 The product of velocity and time give:

- Ans
- 1. distance
 - 2. speed
 - 3. displacement
 - 4. momentum

Question ID : 6913521557
Option 1 ID : 6913526226
Option 2 ID : 6913526228
Option 3 ID : 6913526227
Option 4 ID : 6913526225
Status : Answered
Chosen Option : 3

Q.9 Consider the following question and decide which of the statements is sufficient to answer the question.

Question:

Mika is the niece of Mahi. Determine the present ages of Mika and Mahi.

Statements:

1. Their mean age is 27.
2. After 15 years, Mahi's age will be twice that of Mika's.

- Ans
- 1. Statement 1 and 2 together are not sufficient
 - 2. Statements 1 and 2 together are sufficient
 - 3. Statement 1 alone is sufficient

4. Statement 2 alone is sufficient

Question ID : 6913521541
Option 1 ID : 6913526163
Option 2 ID : 6913526164
Option 3 ID : 6913526161
Option 4 ID : 6913526162
Status : Answered
Chosen Option : 2

Q.1
0 If the frequency of a wave is doubled then its wavelength will be:

- Ans 1. half of the original
 2. three times the original
 3. one-third the original
 4. double the original

Question ID : 6913521563
Option 1 ID : 6913526250
Option 2 ID : 6913526252
Option 3 ID : 6913526251
Option 4 ID : 6913526249
Status : Answered
Chosen Option : 1

Q.1
1 The Khangchendzonga Biosphere Reserve which was included in the UNESCO's World Network of Biosphere Reserve is in:

- Ans 1. Maharashtra
 2. Madhya Pradesh
 3. Sikkim
 4. Assam

Question ID : 6913521599
Option 1 ID : 6913526396
Option 2 ID : 6913526395
Option 3 ID : 6913526393
Option 4 ID : 6913526394
Status : Answered
Chosen Option : 3

Q.1
2 Find the next term in this series

75, 81, 88, 96, _____

- Ans 1. 110
 2. 104
 3. 115
 4. 105

Question ID : 6913521538
Option 1 ID : 6913526149

Option 2 ID : 6913526150
Option 3 ID : 6913526152
Option 4 ID : 6913526151
Status : Answered
Chosen Option : 4

Q.1
3 Which of the following does NOT belong to this group?

- A. Mercury
- B. Paraffin
- C. Coconut oil
- D. Sediment

- Ans
- 1. C
 - 2. B
 - 3. A
 - 4. D

Question ID : 6913521546
Option 1 ID : 6913526183
Option 2 ID : 6913526182
Option 3 ID : 6913526181
Option 4 ID : 6913526184
Status : Answered
Chosen Option : 3

Q.1
4 Choose the organisation that does NOT belong to the given group:

- Ans
- 1. IIM, Ahmedabad
 - 2. NIT, Warangal
 - 3. Reserve Bank of India, Mumbai
 - 4. IISC, Bangalore

Question ID : 6913521526
Option 1 ID : 6913526101
Option 2 ID : 6913526103
Option 3 ID : 6913526102
Option 4 ID : 6913526104
Status : Answered
Chosen Option : 3

Q.1
5 In which city will India's first defence incubators come up?

- Ans
- 1. Hyderabad
 - 2. New Delhi
 - 3. Bengaluru
 - 4. Ahmedabad

Question ID : 6913521590
Option 1 ID : 6913526359
Option 2 ID : 6913526357
Option 3 ID : 6913526360
Option 4 ID : 6913526358
Status : Not Answered
Chosen Option : --

Q.1 Pipe A can empty a filled tank in 5.6 hours while Pipe B can fill the same tank, when empty, in 7 hours. If Pipes A and
6 B are alternately turned on for an hour each time, starting when the tank is full, how long will it take to empty the tank?

- Ans
- 1. 55 hours
 - 2. 48 hours
 - 3. 56 hours
 - 4. 47 hours

Question ID : 6913521520
Option 1 ID : 6913526079
Option 2 ID : 6913526077
Option 3 ID : 6913526078
Option 4 ID : 6913526080
Status : Not Answered
Chosen Option : --

Q.1 _____ can be used as an olfactory indicator.
7

- Ans
- 1. Tamarind
 - 2. Amla
 - 3. Alum
 - 4. Vanilla

Question ID : 6913521571
Option 1 ID : 6913526282
Option 2 ID : 6913526281
Option 3 ID : 6913526283
Option 4 ID : 6913526284
Status : Answered
Chosen Option : 1

Q.1 Given is a question followed by two arguments. Decide which of the arguments is/are strong with respect to the
8 question.

Question:

Should children be taught to wisely use the Internet?

Arguments:

- I. Yes, this way, they will know to use the Internet responsibly.
- II. No, they learn a lot by exploring on their own.

- Ans
- 1. Both arguments I and II are strong.
 - 2. Only argument II is strong.
 - 3. Neither argument I nor II is strong.
 - 4. Only argument I is strong.

Question ID : 6913521535
Option 1 ID : 6913526137
Option 2 ID : 6913526138
Option 3 ID : 6913526139
Option 4 ID : 6913526140
Status : Answered
Chosen Option : 4

Q.1 In the series below one of the terms following the sequence is wrong. Find out the wrong option:
9

11111, 235656, 39816561, 41625665536

- Ans 1. 41625665536
 2. 39816561
 3. 235656
 4. 11111

Question ID : 6913521539
Option 1 ID : 6913526154
Option 2 ID : 6913526155
Option 3 ID : 6913526156
Option 4 ID : 6913526153
Status : Answered
Chosen Option : 4

Q.2 ₹ 1,640 पर 7.5% की साधारण वार्षिक ब्याज की दर से 6 वर्षों में प्राप्त राशि कितनी होगी?
0

- Ans 1. ₹ 742
 2. ₹ 738
 3. ₹ 748
 4. ₹ 750

Question ID : 6913521510
Option 1 ID : 6913526038
Option 2 ID : 6913526039
Option 3 ID : 6913526037
Option 4 ID : 6913526040
Status : Answered
Chosen Option : 2

Q.2 In a bank Deepa deposits a sum of ₹ 6250, which amounts to ₹ 7840 in two years compounded annually. The rate of
1 interest is:

- Ans 1. 10%
 2. 12%
 3. 13%
 4. 11%

Question ID : 6913521511
Option 1 ID : 6913526042
Option 2 ID : 6913526044
Option 3 ID : 6913526041
Option 4 ID : 6913526043
Status : Answered
Chosen Option : 2

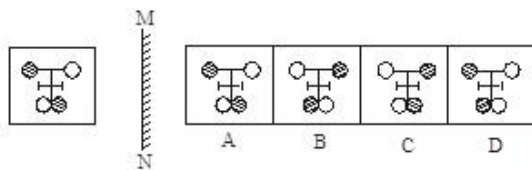
Q.2
2 What is the next term in the given series?

12B, 2H, 14C, 4G, 16D, _____

- Ans
- 1. 6Q
 - 2. 6F
 - 3. 6E
 - 4. 18E

Question ID : 6913521537
Option 1 ID : 6913526148
Option 2 ID : 6913526145
Option 3 ID : 6913526147
Option 4 ID : 6913526146
Status : Answered
Chosen Option : 2

Q.2
3 Choose the mirror image of the following figure:



- Ans
- 1. B
 - 2. D
 - 3. C
 - 4. A

Question ID : 6913521555
Option 1 ID : 6913526218
Option 2 ID : 6913526220
Option 3 ID : 6913526219
Option 4 ID : 6913526217
Status : Answered
Chosen Option : 1

Q.2
4 In the Union Budget 2018, the Union government had announced that it would build a tunnel through the Sela Pass. In which state is the Sela Pass located?

- Ans
- 1. Assam
 - 2. Arunachal Pradesh
 - 3. Tripura
 - 4. Meghalaya

Question ID : 6913521592
Option 1 ID : 6913526365
Option 2 ID : 6913526366
Option 3 ID : 6913526368

Option 4 ID : 6913526367
Status : Not Answered
Chosen Option : --


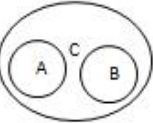
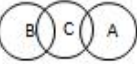
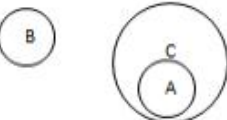
Q.2
5 If the work done by an elevator is 1000 J with a constant force of 200 N, then the distance covered by elevator is:

- Ans
- 1. 0.2 m
 - 2. 2 m
 - 3. 1 m
 - 4. 5 m

Question ID : 6913521562
Option 1 ID : 6913526245
Option 2 ID : 6913526248
Option 3 ID : 6913526247
Option 4 ID : 6913526246
Status : Answered
Chosen Option : 4

Q.2
6 Which of the following correctly represents the relationship between

- A) Length
- B) breadth
- C) Dimension?

- Ans
- 1. 
 - 2. 
 - 3. 
 - 4. 

Question ID : 6913521550
Option 1 ID : 6913526197
Option 2 ID : 6913526200
Option 3 ID : 6913526198
Option 4 ID : 6913526199
Status : Answered
Chosen Option : 2

Q.2
7

इस प्रश्न में एक प्रश्न और उसके बाद दो तर्क दिए गए हैं। आपको निर्णय लेना है कि कौन सा तर्क प्रश्न के संदर्भ में सशक्त है?

क्या वन्य जीव अभयारण्यों की अक्षुण्णता को बनाए रखा जाना चाहिए?

तर्क:

- I. हां, लुप्तप्राय प्रजातियों को रहने के लिए विशेष अलग जगह देनी चाहिए जो पारिस्थितिक संतुलन को बढ़ावा देता है।
- II. नहीं, उन्हें आय उत्पन्न करने के लिए अधिक से अधिक आगंतुकों को आकर्षित करना चाहिए।

Ans

1. केवल तर्क 2 सशक्त है
2. केवल तर्क 1 सशक्त है
3. तर्क 1 और 2 दोनों सशक्त हैं
4. ना तो तर्क 1 और ना ही तर्क 2 सशक्त हैं

Question ID : 6913521532

Option 1 ID : 6913526126

Option 2 ID : 6913526125

Option 3 ID : 6913526128

Option 4 ID : 6913526127

Status : Answered

Chosen Option : 2

Q.2 A cone of diameter 14 cm and height 24 cm is placed on top of a cube of side 15 cm. Find the surface area of the cube.

8

Ans

1. 1675 sq cm
2. 1900 sq cm
3. 1746 sq cm
4. 2054 sq cm

Note: For this question, discrepancy is found in question/answer. So, This question is ignored for all candidates.

Question ID : 6913521517

Option 1 ID : 6913526065

Option 2 ID : 6913526066

Option 3 ID : 6913526068

Option 4 ID : 6913526067

Status : Not Answered

Chosen Option : --

Q.2 Which of the following Veda mentions about magical rituals and charms?

9

Ans

1. Samaveda
2. Yajurveda
3. Atharvana veda
4. Rigveda

Question ID : 6913521586

Option 1 ID : 6913526343

Option 2 ID : 6913526342

Option 3 ID : 6913526344

Option 4 ID : 6913526341

Status : **Answered**
Chosen Option : 1

Q.3
0 In Indian economy, _____ are the principal means of transportation.

- Ans
- 1. ships
 - 2. bullock carts
 - 3. cycles
 - 4. the railways

Question ID : **6913521598**
Option 1 ID : **6913526390**
Option 2 ID : **6913526389**
Option 3 ID : **6913526392**
Option 4 ID : **6913526391**
Status : **Answered**
Chosen Option : 4

Q.3
1 21 g of $MgCO_3$ will have _____ moles of magnesium.

- Ans
- 1. 0.31
 - 2. 0.21
 - 3. 0.25
 - 4. 0.51

Question ID : **6913521569**
Option 1 ID : **6913526276**
Option 2 ID : **6913526275**
Option 3 ID : **6913526273**
Option 4 ID : **6913526274**
Status : **Not Answered**
Chosen Option : --

Q.3
2 Raju gained a profit of 6% by selling a washing machine for ₹ 689. What was the cost price of the washing machine?

- Ans
- 1. ₹ 625
 - 2. ₹ 635
 - 3. ₹ 650
 - 4. ₹ 700

Question ID : **6913521509**
Option 1 ID : **6913526036**
Option 2 ID : **6913526035**
Option 3 ID : **6913526033**
Option 4 ID : **6913526034**
Status : **Answered**
Chosen Option : 3

Q.3
3 The reproductive parts of angiosperms are located in the _____.

- Ans
- 1. Roots

- ✓ 2. Flowers
- ✗ 3. Stem
- ✗ 4. Leaves

Question ID : 6913521580
Option 1 ID : 6913526317
Option 2 ID : 6913526320
Option 3 ID : 6913526318
Option 4 ID : 6913526319
Status : Answered
Chosen Option : 2

Q.3
4 Which of the following does NOT belong to the given group?

- A. Ride
- B. Crawl
- C. Swim
- D. Think

- Ans
- ✓ 1. D
 - ✗ 2. A
 - ✗ 3. B
 - ✗ 4. C

Question ID : 6913521544
Option 1 ID : 6913526176
Option 2 ID : 6913526173
Option 3 ID : 6913526174
Option 4 ID : 6913526175
Status : Answered
Chosen Option : 1

Q.3
5 Which app has the Government of India launched for Road Safety and Highway Users?

- Ans
- ✗ 1. Sukh Yatra
 - ✗ 2. Surakshith Yatra
 - ✗ 3. Sulabh Yatra
 - ✓ 4. Sukhad Yatra

Question ID : 6913521591
Option 1 ID : 6913526362
Option 2 ID : 6913526363
Option 3 ID : 6913526361
Option 4 ID : 6913526364
Status : Answered
Chosen Option : 2

Q.3
6

Find the odd one out.

A	B	C	D
6F	P14	U21	W23

- Ans 1. B
 2. A
 3. C
 4. D

Question ID : 6913521549
Option 1 ID : 6913526194
Option 2 ID : 6913526193
Option 3 ID : 6913526196
Option 4 ID : 6913526195
Status : Answered
Chosen Option : 1

Q.3
7 The lens formula is _____.

- Ans
- $\frac{1}{v} + \frac{1}{u} = \frac{1}{f}$
 - $\frac{1}{f} + \frac{1}{v} = \frac{1}{u}$
 - $\frac{1}{f} + \frac{1}{u} = \frac{1}{v}$
 - $\frac{1}{v} - \frac{1}{u} = \frac{1}{f}$

Note: For this question, discrepancy is found in question/answer. So, This question is ignored for all candidates.

Question ID : 6913521564
Option 1 ID : 6913526253
Option 2 ID : 6913526255
Option 3 ID : 6913526256
Option 4 ID : 6913526254
Status : Answered
Chosen Option : 1

Q.3
8 An object travels 15 m in 4 s and then another 16 m in 2 s. What is the average speed of the object?

- Ans 1. 5.17 s⁻¹
 2. 5.17 ms⁻¹
 3. 6.17 ms⁻¹
 4. 5.17 m

Question ID : 6913521556
Option 1 ID : 6913526223

Option 2 ID : 6913526222
Option 3 ID : 6913526224
Option 4 ID : 6913526221
Status : Answered
Chosen Option : 2

Q.3 The width of each of five continuous classes in a frequency distribution is 5 and the lower class-limit of the lowest class is 10. What is the upper-class limit of the highest class?

- Ans
- 1. 45
 - 2. 35
 - 3. 15
 - 4. 25

Question ID : 6913521523
Option 1 ID : 6913526092
Option 2 ID : 6913526091
Option 3 ID : 6913526089
Option 4 ID : 6913526090
Status : Not Answered
Chosen Option : --

Q.4 What day would it be on 19th April 2020?

- Ans
- 1. Monday
 - 2. Sunday
 - 3. Tuesday
 - 4. Saturday

Question ID : 6913521518
Option 1 ID : 6913526070
Option 2 ID : 6913526069
Option 3 ID : 6913526072
Option 4 ID : 6913526071
Status : Not Answered
Chosen Option : --

Q.4 Pani's house faces West. On entering her home, you will find the kitchen to the right-hand side. With respect to the entrance, in which direction is the kitchen?

- Ans
- 1. South
 - 2. North-East
 - 3. North
 - 4. North-West

Question ID : 6913521554
Option 1 ID : 6913526216
Option 2 ID : 6913526214
Option 3 ID : 6913526215
Option 4 ID : 6913526213
Status : Answered
Chosen Option : 1

Q.4
2 If LEGEND is written as 12575144, then what is the code for TREND?

- Ans
- 1. 20175144
 - 2. 21185144
 - 3. 19185144
 - 4. 20185144

Question ID : 6913521530
Option 1 ID : 6913526118
Option 2 ID : 6913526120
Option 3 ID : 6913526119
Option 4 ID : 6913526117
Status : Answered
Chosen Option : 4

Q.4
3 The value of $22 - [23 - \{24 - (27 - \overline{29 - 30})\}]$ is:

- Ans
- 1. 1
 - 2. -3
 - 3. -4
 - 4. -5

Question ID : 6913521507
Option 1 ID : 6913526028
Option 2 ID : 6913526026
Option 3 ID : 6913526027
Option 4 ID : 6913526025
Status : Answered
Chosen Option : 4

Q.4
4 Which river flows through Surat?

- Ans
- 1. Mahanadi
 - 2. Kim
 - 3. Tapi
 - 4. Rupen

Question ID : 6913521596
Option 1 ID : 6913526382
Option 2 ID : 6913526384
Option 3 ID : 6913526383
Option 4 ID : 6913526381
Status : Answered
Chosen Option : 3

Q.4
5 The number of diagonals in a 26-gon is:

- Ans
- 1. 300
 - 2. 325
 - 3. 299
 - 4. 650

Question ID : 6913521524
Option 1 ID : 6913526094
Option 2 ID : 6913526096
Option 3 ID : 6913526095
Option 4 ID : 6913526093
Status : Answered
Chosen Option : 4

Q.4 Fuel formed under the earth's surface by the decomposition of organic matter is called ____ fuel.

6

- Ans
- 1. charcoal
 - 2. fossil
 - 3. biomass
 - 4. wood

Question ID : 6913521565
Option 1 ID : 6913526258
Option 2 ID : 6913526259
Option 3 ID : 6913526257
Option 4 ID : 6913526260
Status : Answered
Chosen Option : 2

Q.4 If a current of 0.3 A is passed through a coil of resistance 418 ohms for 1 min, find the heat energy generated.

7

- Ans
- 1. 360 cal
 - 2. 540 cal
 - 3. 54 cal
 - 4. 36 cal

Question ID : 6913521574
Option 1 ID : 6913526295
Option 2 ID : 6913526294
Option 3 ID : 6913526293
Option 4 ID : 6913526296
Status : Not Answered
Chosen Option : --

Q.4 _____ element is added with copper and zinc to form bronze.

8

- Ans
- 1. Sn
 - 2. Pb
 - 3. Au
 - 4. Al

Question ID : 6913521573
Option 1 ID : 6913526292
Option 2 ID : 6913526289
Option 3 ID : 6913526291
Option 4 ID : 6913526290
Status : Not Answered
Chosen Option : --

Q.4 $15 \times 3 - 9 \times (5^2 \div 5) \div 5 \div (1 \div 3) + 10 = ?$

- Ans
- 1. 28
 - 2. 18
 - 3. 8
 - 4. 30

Question ID : 6913521508
Option 1 ID : 6913526031
Option 2 ID : 6913526030
Option 3 ID : 6913526029
Option 4 ID : 6913526032
Status : Answered
Chosen Option : 1

Q.5 Consider the given statement and decide which of the following assumptions is/are implicit in the statement.

Statement:

"March endings are always hectic", says the Branch Manager to his colleague.

Assumptions:

- I. There is more work at the end of March.
- II. Much work gets piled up due to lack of timely work.

- Ans
- 1. Neither I nor II is implicit.
 - 2. Only I is implicit.
 - 3. Only II is implicit.
 - 4. Both I and II are implicit.

Question ID : 6913521534
Option 1 ID : 6913526135
Option 2 ID : 6913526133
Option 3 ID : 6913526134
Option 4 ID : 6913526136
Status : Answered
Chosen Option : 2

Q.5 If RARE is written as 181185, then what is the code for YELL?

- Ans
- 1. 2551313
 - 2. 2551212
 - 3. 2561212
 - 4. 2451212

Question ID : 6913521529
Option 1 ID : 6913526114
Option 2 ID : 6913526113
Option 3 ID : 6913526116
Option 4 ID : 6913526115

Q.5
2 Find the odd one out.

A	B	C	D
9I	O15	5E	23W

- Ans
- 1. B
 - 2. D
 - 3. C
 - 4. A

Question ID : 6913521548
Option 1 ID : 6913526190
Option 2 ID : 6913526191
Option 3 ID : 6913526192
Option 4 ID : 6913526189
Status : Answered
Chosen Option : 1

Q.5
3 एक समचतुर्भुज के विकर्ण 12 cm और 16 cm हैं। समचतुर्भुज के मध्य बिंदुओं को जोड़ने पर निर्मित आकृति का क्षेत्रफल क्या होगा?

- Ans
- 1. 192 cm^2
 - 2. 48 cm^2
 - 3. 64 cm^2
 - 4. 96 cm^2

Question ID : 6913521525
Option 1 ID : 6913526100
Option 2 ID : 6913526097
Option 3 ID : 6913526098
Option 4 ID : 6913526099
Status : Not Answered
Chosen Option : --

Q.5
4 _____ is a martial art form of Manipur.

- Ans
- 1. Bagurumba
 - 2. Rouff
 - 3. Thang Ta
 - 4. Bihu

Question ID : 6913521584
Option 1 ID : 6913526336
Option 2 ID : 6913526335

Option 3 ID : 6913526333
Option 4 ID : 6913526334
Status : Not Answered
Chosen Option : --

Q.5
5 Which type of reproduction can bring greater diversity?

- Ans
- 1. Regeneration
 - 2. Sexual
 - 3. Asexual
 - 4. Budding

Question ID : 6913521579
Option 1 ID : 6913526315
Option 2 ID : 6913526313
Option 3 ID : 6913526314
Option 4 ID : 6913526316
Status : Answered
Chosen Option : 2

Q.5
6 As of August 2018, DMK and AIADMK are the regional parties of which state?

- Ans
- 1. Andhra Pradesh
 - 2. Tamil Nadu
 - 3. Kerala
 - 4. Karnataka

Question ID : 6913521593
Option 1 ID : 6913526371
Option 2 ID : 6913526372
Option 3 ID : 6913526369
Option 4 ID : 6913526370
Status : Answered
Chosen Option : 2

Q.5
7 Aqua regia is a mixture of concentrated HNO_3 and concentrated HCl in the ratio _____.

- Ans
- 1. 3 : 1
 - 2. 2 : 3
 - 3. 1 : 2
 - 4. 1 : 3

Question ID : 6913521561
Option 1 ID : 6913526242
Option 2 ID : 6913526243
Option 3 ID : 6913526244
Option 4 ID : 6913526241
Status : Answered
Chosen Option : 3

Q.5
8 $\text{Fe} + \text{CuSO}_4 \rightarrow \text{FeSO}_4 + \text{Cu}$ दी गई अभिक्रिया, _____ का एक उदाहरण है।

- Ans
- ✓ 1. विस्थापन अभिक्रिया
 - ✗ 2. दहन अभिक्रिया
 - ✗ 3. विघटन अभिक्रिया
 - ✗ 4. युग्मन अभिक्रिया

Question ID : 6913521570
Option 1 ID : 6913526278
Option 2 ID : 6913526279
Option 3 ID : 6913526280
Option 4 ID : 6913526277
Status : Answered
Chosen Option : 1

Q.5 A cycle company sells two brands of cycles in a day with a total profit of ₹ 6,000. If the profit from one brand of cycle is 45% of the total profit, what is the profit amount made by selling the other brand of cycle?

- Ans
- ✗ 1. ₹ 5,000
 - ✗ 2. ₹ 3,000
 - ✓ 3. ₹ 3,300
 - ✗ 4. ₹ 3,250

Question ID : 6913521540
Option 1 ID : 6913526158
Option 2 ID : 6913526159
Option 3 ID : 6913526157
Option 4 ID : 6913526160
Status : Answered
Chosen Option : 3

Q.6 When was the Theosophical Society founded?

- Ans
- ✗ 1. 1876
 - ✓ 2. 1875
 - ✗ 3. 1873
 - ✗ 4. 1885

Question ID : 6913521595
Option 1 ID : 6913526378
Option 2 ID : 6913526377
Option 3 ID : 6913526380
Option 4 ID : 6913526379
Status : Not Answered
Chosen Option : --

Q.6
1

Read the given statement(s) and conclusions carefully and select which of the conclusions logically follow(s) from the statement(s).

Statements:

- Some racoons are multicoloured
- Some parrots are multicoloured

Conclusions:

1. Some raccoons are parrots
2. All parrots are racoons

- Ans 1. Both the conclusions follow
 2. None of the conclusions follow
 3. Only conclusion 1 follows
 4. Only conclusion 2 follows

Question ID : 6913521527
Option 1 ID : 6913526106
Option 2 ID : 6913526108
Option 3 ID : 6913526107
Option 4 ID : 6913526105
Status : Answered
Chosen Option : 2

Q.6
2 PCA (supervisory tools to maintain sound financial health of banks) stands for:

- Ans 1. Prompt Corrective Action
 2. Possible Collective Action
 3. Possible Corrective Action
 4. Prompt Collective Action

Question ID : 6913521600
Option 1 ID : 6913526397
Option 2 ID : 6913526400
Option 3 ID : 6913526399
Option 4 ID : 6913526398
Status : Not Answered
Chosen Option : --

Q.6
3 Evaporation of water occurs at _____.

- Ans 1. at freezing point
 2. all temperature
 3. at boiling point
 4. at fusion temperature

Question ID : 6913521567
Option 1 ID : 6913526267
Option 2 ID : 6913526265
Option 3 ID : 6913526266

Option 4 ID : 6913526268
Status : Answered
Chosen Option : 3

Q.6 The mass of an object on the earth is 10 kg. What is its weight on the earth?

- Ans
- 1. 10 N
 - 2. 9.8 N
 - 3. 980 N
 - 4. 98 N

Question ID : 6913521559
Option 1 ID : 6913526233
Option 2 ID : 6913526234
Option 3 ID : 6913526236
Option 4 ID : 6913526235
Status : Answered
Chosen Option : 4

Q.6 Ruksana went to the city from her home at a speed of 6 km/h but came back by the same route at a speed of 5 km/h. The two-way journey took her $16\frac{1}{2}$ hours in total. How far from the city does Ruksana live?

- Ans
- 1. 45 km
 - 2. 37.5 km
 - 3. 52.5 km
 - 4. 60 km

Question ID : 6913521514
Option 1 ID : 6913526053
Option 2 ID : 6913526054
Option 3 ID : 6913526055
Option 4 ID : 6913526056
Status : Answered
Chosen Option : 1

Q.6 नीचे के प्रश्न और उसके बाद दिए गए कथन पर विचार करें और निर्णय लें कि कौन सा कथन प्रश्न का उत्तर देने के लिए पर्याप्त है?

लीला के पास 3 अलग-अलग रंगों के 4 पेन हैं। उसके पास नीले रंग के कितने पेन हैं?

कथन:

- 1. 2 पेन भिन्न रंग के हैं।
- 2. दो पेन का रंग एक जैसा है जो लाल है।

- Ans
- 1. कथन 1 और 2 दोनों एकसाथ पर्याप्त हैं।
 - 2. कथन 1 और 2 दोनों एकसाथ पर्याप्त नहीं हैं।
 - 3. केवल कथन 2 पर्याप्त है।
 - 4. केवल कथन 1 पर्याप्त है।

Question ID : 6913521542
Option 1 ID : 6913526168
Option 2 ID : 6913526167
Option 3 ID : 6913526166

Option 4 ID : 6913526165

Status : Not Attempted and Marked For Review

Chosen Option : --

Q.6 A bullet of mass 12 g is fired from a rifle. The bullet takes 0.006 second to move through its barrel and leaves it with a velocity of 300 m/s. What is the force exerted on the bullet by the rifle?

- Ans
- 1. 180 N
 - 2. 900 N
 - 3. 720 N
 - 4. 600 N

Question ID : 6913521558

Option 1 ID : 6913526232

Option 2 ID : 6913526230

Option 3 ID : 6913526229

Option 4 ID : 6913526231

Status : Not Answered

Chosen Option : --

Q.6 Name the eminent personality from Hindi literature who was awarded the 53rd Jnanpith Award for the year 2017?

- 8
- Ans
- 1. Krishna Sobti
 - 2. Rashmi Bansal
 - 3. Jasodhara Bagchi
 - 4. Sushmita Banerjee

Question ID : 6913521588

Option 1 ID : 6913526350

Option 2 ID : 6913526352

Option 3 ID : 6913526349

Option 4 ID : 6913526351

Status : Answered

Chosen Option : 3

Q.6 Which of the given assumptions are implied from the below statement?

9

Statement:

The school management has announced the addition of music and arts session to each standard.

Assumptions:

- I. The management wants to create a holistic approach to learning.
- II. The management wants to give children a foundation to learn arts.

- Ans
- 1. Neither assumption I nor II is implicit
 - 2. Only assumption II is implicit
 - 3. Only assumption I is implicit
 - 4. Both assumptions I and II are implicit

Question ID : 6913521533

Option 1 ID : 6913526131

Option 2 ID : 6913526130

Option 3 ID : 6913526129
Option 4 ID : 6913526132
Status : Answered
Chosen Option : 2

Q.7 The Report on Indian constitutional reforms, commonly known as the Montagu-Chelmsford Report, was published in:
0

- Ans
- 1. 1905
 - 2. 1910
 - 3. 1920
 - 4. 1918

Question ID : 6913521594
Option 1 ID : 6913526375
Option 2 ID : 6913526373
Option 3 ID : 6913526376
Option 4 ID : 6913526374
Status : Not Answered
Chosen Option : --

Q.7 In a bag containing red, green and pink tokens, the ratio of red to green tokens was 5 : 11 while the ratio of pink to red tokens was 7 : 15. What was the ratio of green to pink tokens?
1

- Ans
- 1. 77 : 75
 - 2. 75 : 77
 - 3. 11 : 7
 - 4. 33 : 7

Question ID : 6913521512
Option 1 ID : 6913526047
Option 2 ID : 6913526048
Option 3 ID : 6913526045
Option 4 ID : 6913526046
Status : Answered
Chosen Option : 4

Q.7 किसी भी प्रमुख में प्रतियोगिता में भाग लेने वाला सबसे युवा भारतीय गोल्फर कौन है?
2

- Ans
- 1. ज्योति रंधावा
 - 2. जीव मिलखा सिंह
 - 3. शुभंकर शर्मा
 - 4. अनिर्वण लाहिड़ी

Question ID : 6913521583
Option 1 ID : 6913526332
Option 2 ID : 6913526330
Option 3 ID : 6913526329
Option 4 ID : 6913526331
Status : Not Answered
Chosen Option : --

Q.7

3 Who is the brand ambassador of the gaming platform Dream 11?

- Ans
- 1. Suresh Raina
 - 2. Virat Kohli
 - 3. Sunil Gavaskar
 - 4. M.S. Dhoni

Question ID : 6913521589
Option 1 ID : 6913526356
Option 2 ID : 6913526355
Option 3 ID : 6913526354
Option 4 ID : 6913526353
Status : Answered
Chosen Option : 4

Q.7
4 Which of the following worms causes elephantiasis?

- Ans
- 1. Filarial worms
 - 2. Round worms
 - 3. Hook worms
 - 4. Tape worms

Question ID : 6913521576
Option 1 ID : 6913526301
Option 2 ID : 6913526302
Option 3 ID : 6913526303
Option 4 ID : 6913526304
Status : Answered
Chosen Option : 1

Q.7
5 Complete the following series.

30, 42, 54, 66, _____

- Ans
- 1. 80
 - 2. 81
 - 3. 78
 - 4. 82

Question ID : 6913521536
Option 1 ID : 6913526141
Option 2 ID : 6913526144
Option 3 ID : 6913526143
Option 4 ID : 6913526142
Status : Answered
Chosen Option : 3

Q.7
6 The time duration that would elapse between 5:47 p.m. of 21th June 2027 and 5:39 p.m. of 22th June 2028 is:

- Ans
- 1. 365 days 23 hours 52 mins
 - 2. 366 days 8 mins

✓ 3. 366 days 23 hours 52 mins

✗ 4. 367 days 8 mins

Question ID : 6913521516

Option 1 ID : 6913526063

Option 2 ID : 6913526061

Option 3 ID : 6913526062

Option 4 ID : 6913526064

Status : Answered

Chosen Option : 1

Q.7
7 Which among the following is a rational number?

Ans ✗ 1. $\sqrt[3]{2} - 2$

✓ 2. $\sqrt[3]{8} - 2$

✗ 3. $\sqrt[3]{12} + 1$

✗ 4. $\sqrt[3]{4} + 4$

Question ID : 6913521504

Option 1 ID : 6913526016

Option 2 ID : 6913526014

Option 3 ID : 6913526013

Option 4 ID : 6913526015

Status : Not Answered

Chosen Option : --

Q.7
8 Which of the following elements does NOT belong to group 17?

Ans ✗ 1. Bromine

✓ 2. Argon

✗ 3. Chlorine

✗ 4. Fluorine

Question ID : 6913521575

Option 1 ID : 6913526300

Option 2 ID : 6913526297

Option 3 ID : 6913526298

Option 4 ID : 6913526299

Status : Answered

Chosen Option : 2

Q.7
9 What is twice the value of p if

$$p = 36 - 2(20 + 12 \div 4 \times 3 - 2 \times 2) + 10$$

Ans ✓ 1. -4

✗ 2. -10

✗ 3. -2

✗ 4. -8

Question ID : 6913521502
Option 1 ID : 6913526007
Option 2 ID : 6913526005
Option 3 ID : 6913526008
Option 4 ID : 6913526006
Status : Answered
Chosen Option : 4

Q.8
0 _____ is/are harmful radiation emitted by the sun.

- Ans
- 1. Gamma rays
 - 2. Alpha rays
 - 3. Ultraviolet radiation
 - 4. Infrared radiation

Question ID : 6913521566
Option 1 ID : 6913526261
Option 2 ID : 6913526262
Option 3 ID : 6913526264
Option 4 ID : 6913526263
Status : Answered
Chosen Option : 3

Q.8 A shopkeeper multiplied 6245 by 62 instead of 52. How much was his answer greater than the correct answer?

- 1
- Ans
- 1. 62450
 - 2. 62455
 - 3. 60425
 - 4. 61455

Question ID : 6913521506
Option 1 ID : 6913526022
Option 2 ID : 6913526021
Option 3 ID : 6913526024
Option 4 ID : 6913526023
Status : Answered
Chosen Option : 1

Q.8
2 To which block do the elements with atomic number 56 belong??

- Ans
- 1. p
 - 2. f
 - 3. d
 - 4. s

Question ID : 6913521568
Option 1 ID : 6913526270
Option 2 ID : 6913526269
Option 3 ID : 6913526271
Option 4 ID : 6913526272
Status : Answered
Chosen Option : 2

Q.8 लीना दो रास्तों से अपने ऑफिस को जा सकती है। पहले रास्ते की दूरी 5 km है जबकि दूसरे रास्ते की दूरी 7 km है।
3 किसी कारणवश वह एक ही रास्ते से लगातार दो दिन ऑफिस नहीं जा पाती है। यदि वह सोमवार को पहले रास्ते से जाती है तो उस हफ्ते वह दूसरे रास्ते से कुल कितने km की दूरी तय करती है?

- Ans
- 1. 21 km
 - 2. 14 km
 - 3. 42 km
 - 4. 28 km

Question ID : 6913521551

Option 1 ID : 6913526201

Option 2 ID : 6913526203

Option 3 ID : 6913526202

Option 4 ID : 6913526204

Status : Answered

Chosen Option : 1

Q.8 What was the day of the week on 7th January 2011?
4

- Ans
- 1. Monday
 - 2. Friday
 - 3. Tuesday
 - 4. Wednesday

Question ID : 6913521519

Option 1 ID : 6913526076

Option 2 ID : 6913526075

Option 3 ID : 6913526073

Option 4 ID : 6913526074

Status : Not Answered

Chosen Option : --

Q.8 8 kg 25 g को 25 से गुणा करने पर क्या प्राप्त होगा?
5

- Ans
- 1. 200 kg
 - 2. 200.625 kg
 - 3. 199.625 kg
 - 4. 199 kg

Question ID : 6913521503

Option 1 ID : 6913526011

Option 2 ID : 6913526012

Option 3 ID : 6913526010

Option 4 ID : 6913526009

Status : Answered

Chosen Option : 2

Q.8 If LOAD is written as 121514, then what is the code for DEAR?
6

- Ans
- 1. 94511

- 2. 45119
- 3. 45218
- 4. 45118

Question ID : 6913521528
 Option 1 ID : 6913526110
 Option 2 ID : 6913526111
 Option 3 ID : 6913526112
 Option 4 ID : 6913526109
 Status : Answered
 Chosen Option : 4

Q.8 A hostel had provision for 60 men for 35 days. After 10 days, 15 more men arrived at the hostel. How long would the remaining provision last at the same rate?

- Ans
- 1. 18 days
 - 2. 15 days
 - 3. 20 days
 - 4. 25 days

Question ID : 6913521513
 Option 1 ID : 6913526052
 Option 2 ID : 6913526049
 Option 3 ID : 6913526050
 Option 4 ID : 6913526051
 Status : Not Answered
 Chosen Option : --

Q.8 Identify the option that will replace the question mark (?).

Ⓡ	E	E	€	€	₹	?
				E	Ⓡ	
₹	€	Ⓡ	₹			

A	B	C	D	
Ⓡ	₹	€	E	
E	€	₹	Ⓡ	
		€	E	
			₹	€

- Ans
- 1. D
 - 2. A
 - 3. B
 - 4. C

Question ID : 6913521545
 Option 1 ID : 6913526180
 Option 2 ID : 6913526177
 Option 3 ID : 6913526178
 Option 4 ID : 6913526179
 Status : Answered

Q.8 Sukanya walks 2 km towards South and then turns right and walks 500 m. In which direction is she with respect to her initial position?

- Ans
- 1. North-West
 - 2. South-West
 - 3. South-East
 - 4. North-East

Question ID : 6913521553

Option 1 ID : 6913526210

Option 2 ID : 6913526212

Option 3 ID : 6913526211

Option 4 ID : 6913526209

Status : Answered

Chosen Option : 2

Q.9₀ If $\cos x + \sin x = \sqrt{2} \cos x$, then the value of $\cot x$ is:

- Ans
- 1. $\sqrt{2} + 1$
 - 2. 1
 - 3. $\sqrt{2} - 1$
 - 4. $\sqrt{2}$

Question ID : 6913521521

Option 1 ID : 6913526084

Option 2 ID : 6913526082

Option 3 ID : 6913526083

Option 4 ID : 6913526081

Status : Not Answered

Chosen Option : --

Q.9₁ Which of the following is NOT a bryophyte?

- Ans
- 1. Marchantia
 - 2. Funaria
 - 3. Chara
 - 4. Riccia

Question ID : 6913521577

Option 1 ID : 6913526306

Option 2 ID : 6913526305

Option 3 ID : 6913526308

Option 4 ID : 6913526307

Status : Not Answered

Chosen Option : --

Q.9₂ When two trains are moving in opposite direction at a speed of 40 km/hr and 32 km/hr respectively, the faster train passes a man sitting in the slower train in 15 seconds. Find the length of the faster train.

- Ans
- 1. 120 m

2. 300 m

3. 200 m

4. 100 m

Question ID : 6913521515

Option 1 ID : 6913526060

Option 2 ID : 6913526058

Option 3 ID : 6913526057

Option 4 ID : 6913526059

Status : Not Answered

Chosen Option : --

Q.9 Consider the following question and decide which of the statements is sufficient to answer the question.

3

Question:

Shiju has 10 bags that each weigh the same. What is the total weight of the 10 bags?

Statements:

1. One-third of the weight of each bag is 8 kg

2. The bags contain rice.

Ans 1. Statement 1 and 2 together are not sufficient

2. Statement 1 alone is sufficient

3. Either statement 1 or 2 is sufficient

4. Statement 2 alone is sufficient

Question ID : 6913521543

Option 1 ID : 6913526169

Option 2 ID : 6913526170

Option 3 ID : 6913526172

Option 4 ID : 6913526171

Status : Answered

Chosen Option : 2

Q.9 Find the L.C.M of $\frac{1}{2}$, $\frac{2}{5}$, $\frac{4}{7}$, and $\frac{6}{17}$

Ans 1. 24

2. 6

3. 12

4. 18

Question ID : 6913521501

Option 1 ID : 6913526004

Option 2 ID : 6913526001

Option 3 ID : 6913526002

Option 4 ID : 6913526003

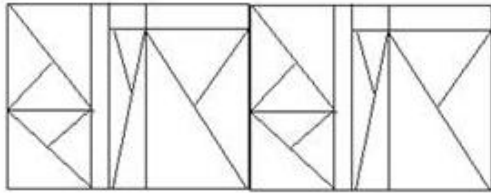
Status : Not Answered

Chosen Option : --

Q.9

5

How many triangles are there in the following figure?



- Ans
- 1. 20
 - 2. 34
 - 3. 30
 - 4. 14

Question ID : 6913521552

Option 1 ID : 6913526206

Option 2 ID : 6913526208

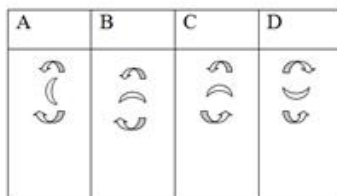
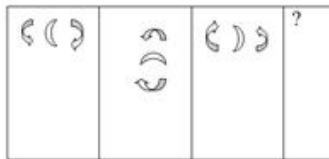
Option 3 ID : 6913526207

Option 4 ID : 6913526205

Status : Answered

Chosen Option : 2

Q.9 Study the following patterns and decide which pattern will follow next.



- Ans
- 1. C
 - 2. A
 - 3. B
 - 4. D

Question ID : 6913521547

Option 1 ID : 6913526187

Option 2 ID : 6913526185

Option 3 ID : 6913526186

Option 4 ID : 6913526188

Status : Answered

Chosen Option : 4

Q.9 Shubhangi Swaroop became the first-ever female pilot to be inducted into the _____.

- Ans
- 1. Indian R&AW

- 2. Indian Air Force
- 3. Indian Navy
- 4. Indian Army

Question ID : 6913521587
Option 1 ID : 6913526345
Option 2 ID : 6913526346
Option 3 ID : 6913526347
Option 4 ID : 6913526348
Status : Answered
Chosen Option : 2

Q.9
8 _____ is an ore of mercury.

- Ans
- 1. Magnetite
 - 2. Cinnabar
 - 3. Hematite
 - 4. Bauxite

Question ID : 6913521572
Option 1 ID : 6913526285
Option 2 ID : 6913526287
Option 3 ID : 6913526286
Option 4 ID : 6913526288
Status : Answered
Chosen Option : 1

Q.9
9 Who was honoured with the Indian Film Personality of 2017 Award at the 48th International Film Festival Of India (IFFI)?

- Ans
- 1. Shammi Kapoor
 - 2. Akshay Kumar
 - 3. Prabhas
 - 4. Amitabh Bachchan

Question ID : 6913521585
Option 1 ID : 6913526339
Option 2 ID : 6913526340
Option 3 ID : 6913526337
Option 4 ID : 6913526338
Status : Answered
Chosen Option : 4

Q.1
00 What is the area of Gujarat?

- Ans
- 1. 1,96,024 km²
 - 2. 1,99,724 km²
 - 3. 1,96,204 km²
 - 4. 1,66,024 km²

Question ID : 6913521597

Option 1 ID : 6913526386

Option 2 ID : 6913526388

Option 3 ID : 6913526385

Option 4 ID : 6913526387

Status : **Not Answered**

Chosen Option : --

Prepp



Latest Sarkari jobs, Govt Exam alerts, Results and Vacancies

- ▶ Latest News and Notification
- ▶ Exam Paper Analysis
- ▶ Topic-wise weightage
- ▶ Previous Year Papers with Answer Key
- ▶ Preparation Strategy & Subject-wise Books

To know more [Click Here](#)



www.prepp.in