

















Practice, Learn and Achieve
Your Goal with Prepp

SSC CHSL Exam

Tier I Previous Paper

Simplifying
Government Exams

 SSC CHSL	 IAS EXAM	 RRB NTPC	 NTSE	 CDS
 SSC CGL	 CBSE UGC NET	 IBPS PO	 NDA	
 SBI PO	 IBPS CLERK	 AFCAT	 SSC JE	 CTET
 CSIR UGC NET	 CAPF	 IBPS RRB		

www.prepp.in

Combined Higher Secondary Level Examination 2019 Tier I

Roll Number	
Candidate Name	
Venue Name	
Exam Date	17/03/2020
Exam Time	1:00 PM - 2:00 PM
Subject	CHSL Tier 1

Section : English Language (Basic Knowledge)

Q.1 Select the most appropriate option to fill in the blank.

The strong Indian batting line-up will _____ a big worry for the visiting cricket team.

- Ans
- 1. pick
 - 2. put
 - 3. place
 - 4. pose

Question ID : 8161611180
Status : Answered
Chosen Option : 2

Q.2 Select the option that is the passive form of the sentence.

We have chosen the colour of the new car we want to buy.

- Ans
- 1. The colour of the new car we want to buy can be chosen by us.
 - 2. The colour of the new car we want to buy had been chosen.
 - 3. The colour of the new car we want to buy has been chosen by us.
 - 4. The colour of the new car we want to buy is being chosen by us.

Question ID : 8161611156
Status : Answered
Chosen Option : 3

Q.3 Select the most appropriate antonym of the given word.

MEDDLE (v)

- Ans
- 1. Fortify
 - 2. Support
 - 3. Ignore
 - 4. Prize

Question ID : 8161611170
Status : Not Answered
Chosen Option : --

Q.4 Given below are four jumbled sentences. Select the option that gives their correct order.

- A. From the outer entrance itself he had noticed that there was no one inside.
- B. It was quite dark by the time Raman turned into the lane and reached the temple.
- C. On entering the main temple, he prostrated before the goddess, got up and then sat directly in front of the idol.
- D. However, an oil lamp which was burning before the idol of Kaali Ma lit up the place and he could go up the steps.

- Ans
- 1. CABD
 - 2. DBCA
 - 3. ABDC
 - 4. BADC

Question ID : 8161611166
Status : Answered
Chosen Option : 3

Comprehension:

In the following passage some words have been deleted. Fill in the blanks with the help of the alternatives given. Select the most appropriate option for each blank.

The flight was packed. There were (1)_____ parents with small children. Specifically, a three-year-old boy (2)_____ the row in front of me (3)_____ announcing his presence by letting (4)_____ ear-piercing shrieks every 45 seconds. I settled (5)_____, hoping the kid would calm down.

SubQuestion No : 5

Q.5 Select the most appropriate option to fill in blank No.1.

- Ans
- 1. all
 - 2. several
 - 3. most
 - 4. any

Question ID : 8161611161
Status : Answered
Chosen Option : 2

Comprehension:

In the following passage some words have been deleted. Fill in the blanks with the help of the alternatives given. Select the most appropriate option for each blank.

The flight was packed. There were (1)_____ parents with small children. Specifically, a three-year-old boy (2)_____ the row in front of me (3)_____ announcing his presence by letting (4)_____ ear-piercing shrieks every 45 seconds. I settled (5)_____, hoping the kid would calm down.

SubQuestion No : 6

Q.6 Select the most appropriate option to fill in blank No.2.

- Ans
- 1. inside
 - 2. over
 - 3. in
 - 4. at

Question ID : 8161611162
Status : Answered
Chosen Option : 3

Comprehension:

In the following passage some words have been deleted. Fill in the blanks with the help of the alternatives given. Select the most appropriate option for each blank.

The flight was packed. There were (1)_____ parents with small children. Specifically, a three-year-old boy (2)_____ the row in front of me (3)_____ announcing his presence by letting (4)_____ ear-piercing shrieks every 45 seconds. I settled (5)_____, hoping the kid would calm down.

SubQuestion No : 7

Q.7 Select the most appropriate option to fill in blank No.3.

- Ans
- 1. are
 - 2. had
 - 3. was
 - 4. were

Question ID : 8161611163

Status : Answered

Chosen Option : 3

Comprehension:

In the following passage some words have been deleted. Fill in the blanks with the help of the alternatives given. Select the most appropriate option for each blank.

The flight was packed. There were (1)_____ parents with small children. Specifically, a three-year-old boy (2)_____ the row in front of me (3)_____ announcing his presence by letting (4)_____ ear-piercing shrieks every 45 seconds. I settled (5)_____, hoping the kid would calm down.

SubQuestion No : 8

Q.8 Select the most appropriate option to fill in blank No.4.

- Ans
- 1. across
 - 2. leave
 - 3. loose
 - 4. away

Question ID : 8161611164

Status : Answered

Chosen Option : 1

Comprehension:

In the following passage some words have been deleted. Fill in the blanks with the help of the alternatives given. Select the most appropriate option for each blank.

The flight was packed. There were (1)_____ parents with small children. Specifically, a three-year-old boy (2)_____ the row in front of me (3)_____ announcing his presence by letting (4)_____ ear-piercing shrieks every 45 seconds. I settled (5)_____, hoping the kid would calm down.

SubQuestion No : 9

Q.9 Select the most appropriate option to fill in blank No.5.

- Ans
- 1. up
 - 2. out
 - 3. on
 - 4. down

Question ID : 8161611165
Status : Answered
Chosen Option : 4

Q.10 Select the most appropriate option to fill in the blank.

The minister said, "Anyone using drones will have to register them on an _____ portal."

- Ans
- 1. airport
 - 2. aviation
 - 3. airline
 - 4. aeroplane

Question ID : 8161611181
Status : Answered
Chosen Option : 2

Q.11 Select the alternative that will improve the underlined part of the sentence. In case there is no improvement select 'No improvement'.

Sidharth want to become a football player but needs to practice more rigorously.

- Ans
- 1. wants to become
 - 2. is wanting to become
 - 3. No improvement
 - 4. wanted becoming

Question ID : 8161611169
Status : Answered
Chosen Option : 1

Q.12 Select the word with the correct spelling.

- Ans 1. Vizibility
 2. Piety
 3. Certanity
 4. Notoreity

Question ID : 8161611174
Status : Answered
Chosen Option : 2

Q.13 Select the option that is the direct form of the sentence.

Dhiraj said that he had been to Goa the previous year also.

- Ans 1. Dhiraj said, "He has been to Goa the previous year also."
 2. Dhiraj said, "I had been to Goa the previous year also."
 3. Dhiraj said, "I have been to Goa last year also."
 4. Dhiraj told, "I went to Goa the last year also."

Question ID : 8161611157
Status : Answered
Chosen Option : 3

Q.14 Select the word with the correct spelling.

- Ans 1. Contemptuous
 2. Aggresive
 3. Inseckts
 4. Biscits

Question ID : 8161611175
Status : Answered
Chosen Option : 2

Q.15 Given below are four jumbled sentences. Select the option that gives their correct order.

- A. A common sight now is that on the roads of Yangon antiquated cars move alongside shiny new vehicles.
B. A newly-built highway connects Mandalay to the city of Rangoon, now called Yangon.
C. Similarly, hurriedly constructed glass-fronted buildings stand next to old colonial structures.
D. Yangon is fairly typical of any developing city in Asia, standing as it does at the crossroads of modernisation.

- Ans 1. DABC
 2. ADCB
 3. CDBA
 4. BDAC

Question ID : 8161611167
Status : Answered
Chosen Option : 4

Q.16 Select the most appropriate meaning of the underlined idiom in the given sentence.

We enjoyed watching the film because it was a down-to-earth depiction of modern life.

- Ans
- 1. fanciful and dreamlike
 - 2. pleasing and entertaining
 - 3. practical and direct
 - 4. short and meaningful

Question ID : 8161611172
Status : Answered
Chosen Option : 3

Q.17 Select the alternative that will improve the underlined part of the sentence. In case there is no improvement select 'No improvement'.

I have prepared well for the exam and am ready to answer any question.

- Ans
- 1. will prepared
 - 2. No improvement
 - 3. preparing
 - 4. may prepare

Question ID : 8161611168
Status : Answered
Chosen Option : 2

Q.18 Select the word which means the same as the group of words given.

Government by a king or a queen

- Ans
- 1. Monarchy
 - 2. Oligarchy
 - 3. Aristocracy
 - 4. Plutocracy

Question ID : 8161611176
Status : Answered
Chosen Option : 1

Q.19 Select the most appropriate antonym of the given word.

RUEFUL

- Ans
- 1. Fragrant
 - 2. Joyful
 - 3. Regretful
 - 4. Spicy

Question ID : 8161611171
Status : Not Answered
Chosen Option : --

Q.20 Select the most appropriate meaning of the underlined idiom in the given sentence.

His guide asked him to pull up his socks if he wanted a good rank.

- Ans
- 1. take care to be more formal
 - 2. make a greater effort to improve
 - 3. give attention to his appearance also
 - 4. dress more carefully and neatly

Question ID : 8161611173
Status : Answered
Chosen Option : 2

Q.21 Select the segment in the sentence, which contains a grammatical error.

Plenty of people likes to celebrate New Year's eve with their family and friends.

- Ans
- 1. likes to celebrate
 - 2. New Year's eve with
 - 3. Plenty of people
 - 4. their family and friends

Question ID : 8161611159
Status : Answered
Chosen Option : 1

Q.22 Select the word which means the same as the group of words given.

A vertical passageway into a mine

- Ans
- 1. Canal
 - 2. Lobby
 - 3. Shaft
 - 4. Aisle

Question ID : 8161611177
Status : Answered
Chosen Option : 3

Q.23 Select the most appropriate synonym of the given word.

SURGE

- Ans
- 1. Hygienic
 - 2. Clean
 - 3. Smooth
 - 4. Rush

Question ID : 8161611179
Status : Answered
Chosen Option : 4

Q.24 Select the most appropriate synonym of the given word.

COVE

- Ans
- 1. Pit
 - 2. Hollow
 - 3. Bay
 - 4. Crater

Question ID : 8161611178
Status : Not Answered
Chosen Option : --

Q.25 Select the segment in the sentence, which contains a grammatical error.

This furnitures has been taken on hire for the function in the college.

- Ans
- 1. been taken
 - 2. on hire for the function
 - 3. This furnitures has
 - 4. in the college

Question ID : 8161611158
Status : Answered
Chosen Option : 3

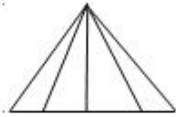
Section : General Intelligence

Q.1 Four numbers have been given, out of which three are alike in some manner and one is different. Select the one that is different.

- Ans
- 1. 122
 - 2. 170
 - 3. 256
 - 4. 226

Question ID : 8161611188
Status : Answered
Chosen Option : 3

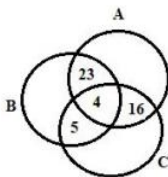
Q.2 Find the number of triangles in the given figure.



- Ans
- 1. 7
 - 2. 8
 - 3. 13
 - 4. 10

Question ID : 8161611202
Status : Answered
Chosen Option : 4

Q.3 In the given Venn diagram, circle A represents books, circle B represents pens and circle C, represents pencils. Which number represents only books and pencils?



- Ans
- 1. 23
 - 2. 16
 - 3. 20
 - 4. 5

Question ID : 8161611206
Status : Answered
Chosen Option : 2

Q.4 Study the given pattern carefully and select the number that can replace the question mark (?) in it.

13	19	71	9	128	32
4		10		?	

- Ans
- 1. 16
 - 2. 26
 - 3. 12
 - 4. 20

Question ID : 8161611185
Status : Answered
Chosen Option : 4

Q.5 Select the correct mirror image from the answer figures when the mirror is placed on the line PQ as shown in the question figure.

Question figure:



Ans



Question ID : 8161611205

Status : Answered

Chosen Option : 4

Q.6 Choose the correct cluster of letters to complete the given series.

abb_baa_a_bad_aba

Ans

1. abab

2. ccac

3. abba

4. aabb

Question ID : 8161611192

Status : Not Attempted and Marked For Review

Chosen Option : --

Q.7 Select the option that does NOT belong to the given series:

QP, JK, ON, LM, NO

Ans

1. JK

2. ON

3. LM

4. NO

Question ID : 8161611197

Status : Answered

Chosen Option : 4

Q.8 Study the given pattern carefully and select the number that can replace the question mark (?) in it.

5 6 4 26

7 6 5 37

4 8 10 ?

Ans 1. 22

2. 49

3. 17

4. 65

Question ID : 8161611186

Status : Answered

Chosen Option : 1

Q.9 $A + B$ means 'A is the father of B';

$A - B$ means 'A is the wife of B',

$A \times B$ means 'A is daughter of B',

$A \div B$ means 'A is the son of B' .

If $J \times K + L \div M$, then how is M related to J?

Ans 1. Mother

2. Father

3. Brother

4. Sister

Question ID : 8161611195

Status : Answered

Chosen Option : 1

Q.10 Four words have been given, out of which three are alike in some manner and one is different. Select the odd one.

Ans 1. Ladakh

2. Shimla

3. Dehradun

4. Gangtok

Question ID : 8161611198

Status : Answered

Chosen Option : 1

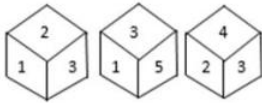
Q.11 Which two signs or numbers need to be interchanged to make the following equation correct?

$$(18 \div 9) + 9 \times 8 = 24$$

- Ans
- 1. 18, 8
 - 2. +, ÷
 - 3. ×, ÷
 - 4. +, ×

Question ID : 8161611183
Status : Answered
Chosen Option : 2

Q.12 Three different positions of the same dice are shown. Select the number that will be on the face opposite to the one having 3.




- Ans
- 1. 5
 - 2. 1
 - 3. 6
 - 4. 4

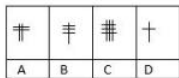
Question ID : 8161611200
Status : Answered
Chosen Option : 3

Q.13 Study the given pattern in the question figure carefully and select the option from the answer figures that can replace the question mark (?) in it.

Question figure:



Answer Figures:



- Ans
- 1. A
 - 2. B
 - 3. C
 - 4. D

Question ID : 8161611201
Status : Answered
Chosen Option : 3

Q.14 Select the option that is related to the third number in the same way as the second number is related to the first number.

13 : 17 :: 73 : ?

- Ans**
- 1. 99
 - 2. 81
 - 3. 78
 - 4. 79

Question ID : **8161611184**
Status : **Answered**
Chosen Option : **2**

Q.15 Read the given statements and conclusions carefully. Assuming that the information given in the statements is true, even if it appears to be at variance with commonly known facts, decide which of the given conclusions logically follow(s) from the statements.

Statements:

Some Pen are Ink.

Some Paper are Ink.

Conclusions:

(I) All Ink are Pen.

(II) Some Pens are Paper.

- Ans**
- 1. Both conclusions I and II follow.
 - 2. Only conclusion II follows.
 - 3. Only conclusion I follows.
 - 4. Either conclusion I or conclusion II follows.

Question ID : **8161611199**
Status : **Answered**
Chosen Option : **2**

Q.16 In a certain code language, OPERATION is written as PNFBRJMM. How will ACCIDENT be written as in code language?

- Ans**
- 1. BADGEFOR
 - 2. ABDGECOR
 - 3. BADGECOR
 - 4. BADGECRO

Question ID : **8161611190**
Status : **Answered**
Chosen Option : **3**

Q.17 Select the letter that will come next in the following series.

L, M, K, N, J, O, ?

- Ans
- 1. P
 - 2. H
 - 3. I
 - 4. R

Question ID : 8161611194
Status : Answered
Chosen Option : 3

Q.18 Select the option from the answer figures in which the given question figure is embedded.

Question figure:



Ans

- 1.
- 2.
- 3.
- 4.

Question ID : 8161611203
Status : Answered
Chosen Option : 1

Q.19 Select the number that will come next in the following series.

7, 11, 13, 17, 23, 37, ?

- Ans
- 1. 25
 - 2. 41
 - 3. 33
 - 4. 27

Question ID : 8161611189
Status : Not Attempted and Marked For Review
Chosen Option : --

Q.20 Select the option that is related to the third word in the same way as the second word is related to the first word.

Energy : Joule :: Power : ?

- Ans
- 1. Watt
 - 2. Newton
 - 3. Energy
 - 4. Work

Question ID : 8161611196
Status : Answered
Chosen Option : 1

Q.21 If 3129 is coded as CCI and 5674 is coded as EMD, then how will 6878 be coded as?

- Ans
- 1. FOH
 - 2. FHO
 - 3. GOI
 - 4. NGH

Question ID : 8161611191
Status : Answered
Chosen Option : 1

Q.22 Select the number that can replace the question mark (?) in the following series.

2, 10, 26, ?, 82

- Ans
- 1. 46
 - 2. 58
 - 3. 50
 - 4. 65

Question ID : 8161611187
Status : Answered
Chosen Option : 2

Q.23 Select the option that is related to the third term in the same way as the second term is related to the first term.

AB : C :: HJ : ?

- Ans
- 1. Q
 - 2. K
 - 3. R
 - 4. I

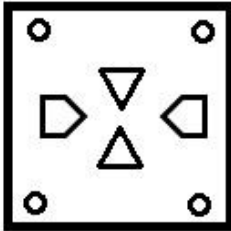
Question ID : 8161611193
Status : Answered
Chosen Option : 3

Q.24 The sequence of folding a piece of paper and the manner in which the folded paper has been cut is shown in the following figures. How would this paper look when unfolded?

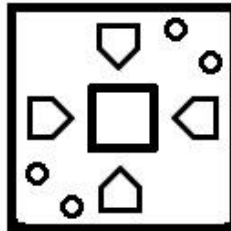


Ans

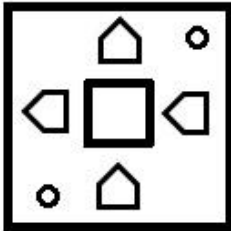
✓ 1.



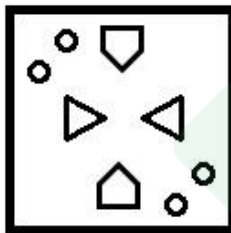
✗ 2.



✗ 3.



✗ 4.



Question ID : 8161611204

Status : Answered

Chosen Option : 3

Q.25 Aarav's mother was 3 times as old as Aarav 5 years ago. After 5 years she will be twice as old as Aarav. How old is Aarav today?

Ans ✓ 1. 15 years

✗ 2. 25 years

✗ 3. 10 years

✗ 4. 20 years

Question ID : 8161611182

Status : Answered

Chosen Option : 1

Section : Quantitative Aptitude(Basic Arithmetic Skill)

Q.1 The average price of three items is ₹14,265. If their prices are in the ratio 7 : 9 : 11, then the price of the costliest item is:

- Ans 1. ₹17,435
 2. ₹16,235
 3. ₹19,875
 4. ₹14,875

Question ID : 8161611210
Status : Answered
Chosen Option : 1

Q.2 यदि एक संख्या के $\frac{1}{4}$ (one-fourth) का $\frac{1}{5}$ (one-fifth) 35 है, तो उस संख्या का $\frac{7}{8}$ (seven-eighth) कितना होगा?

- Ans 1. 612.5
 2. 715
 3. 624.5
 4. 723.5

Question ID : 8161611224
Status : Answered
Chosen Option : 1

Q.3 The given data shows the number of mobiles (in thousands) manufactured by companies C-1, C-2, C-3 and C-4 in 2017, 2018 and 2019.



Which company witnessed the highest increase in manufacturing from 2017 to 2018?

- Ans 1. C-3
 2. C-2
 3. C-1
 4. C-4

Question ID : 8161611231
Status : Answered
Chosen Option : 3

Q.4 If the cost price of 25 articles is equal to the selling price of 35 articles find the profit/loss percentage.

- Ans**
- 1. Loss – 28.57%
 - 2. Profit – 28.57%
 - 3. Loss – 18.93%
 - 4. Profit – 18.93%

Question ID : **8161611213**
Status : **Answered**
Chosen Option : **1**

Q.5 There are five stations on a railway line. What is the number of different journey tickets that are required for railway authorities?

- Ans**
- 1. 30
 - 2. 20
 - 3. 35
 - 4. 25

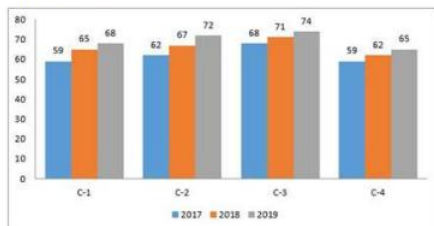
Question ID : **8161611222**
Status : **Answered**
Chosen Option : **2**

Q.6 If a number is divided by 3, the remainder will be 2. If the number is added by 5 and then divided by 3, then what will be the remainder?

- Ans**
- 1. 3
 - 2. 1
 - 3. 2
 - 4. 0

Question ID : **8161611220**
Status : **Answered**
Chosen Option : **2**

Q.7 The given data shows the number of mobiles (in thousands) manufactured by companies C-1, C-2, C-3 and C-4 in 2017, 2018 and 2019.

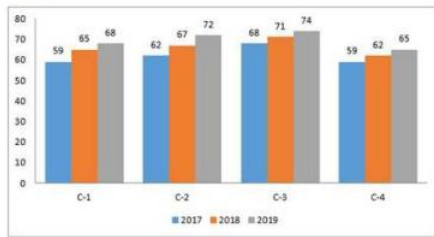


Which company manufactured the least number of mobiles across all the years?

- Ans**
- 1. C-4
 - 2. C-3
 - 3. C-1
 - 4. C-2

Question ID : **8161611229**
Status : **Answered**
Chosen Option : **1**

Q.8 The given data shows the number of mobiles (in thousands) manufactured by companies C-1, C-2, C-3 and C-4 in 2017, 2018 and 2019.



Which company manufactured the highest number of mobiles across all the years?

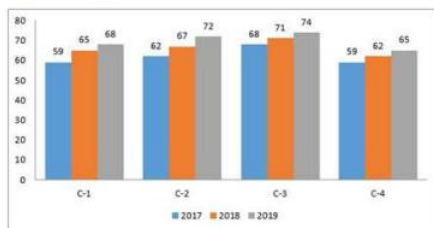
- Ans**
- 1. C-2
 - 2. C-3
 - 3. C-4
 - 4. C-1

Question ID : 8161611228

Status : Answered

Chosen Option : 2

Q.9 The given data shows the number of mobiles (in thousands) manufactured by companies C-1, C-2, C-3 and C-4 in 2017, 2018 and 2019.



What is the ratio of total products manufactured by C-1 to that of C-4?

- Ans**
- 1. 14 : 21
 - 2. 11 : 13
 - 3. 27 : 35
 - 4. 32 : 31

Question ID : 8161611230

Status : Answered

Chosen Option : 4

Q.10 Latha deposited an amount of ₹35,000 in a bank with simple interest 11% per annum. How much interest will she earn after one year?

- Ans**
- 1. ₹3,370
 - 2. ₹3,500
 - 3. ₹3,850
 - 4. ₹3,220

Question ID : 8161611215

Status : Answered

Chosen Option : 3

Q.11 How much time will a horse take to run around a square field of side 175 m if it runs at the speed of 15 km/hr?

- Ans
- 1. 180 sec
 - 2. 175 sec
 - 3. 155 sec
 - 4. 168 sec

Question ID : 8161611208
Status : Answered
Chosen Option : 4

Q.12 Find the circumference of a circle whose diameter is 12 inches.

- Ans
- 1. 87.4672 cm
 - 2. 95.7072 cm
 - 3. 88.1876 cm
 - 4. 90.2348 cm

Question ID : 8161611216
Status : Answered
Chosen Option : 2

Q.13 Find the value of $\cos 225^\circ$

- Ans
- 1. -0.7071
 - 2. -0.866
 - 3. 0.7071
 - 4. 0.866

Question ID : 8161611226
Status : Answered
Chosen Option : 1

Q.14 A shopkeeper purchased pens in bulk for ₹28 each. He sold each for ₹40. What was his profit percentage?

- Ans
- 1. 42.85%
 - 2. 28.40%
 - 3. 38.75%
 - 4. 48.12%

Question ID : 8161611211
Status : Answered
Chosen Option : 1

Q.15 The equation of circle with centre (1,-2) and radius 4 cm is:

- Ans
- 1. $x^2 + y^2 + 2x - 4y = 16$
 - 2. $x^2 + y^2 - 2x + 4y = 16$
 - 3. $x^2 + y^2 + 2x - 4y = 11$
 - 4. $x^2 + y^2 - 2x + 4y = 11$

Question ID : 8161611217
Status : Answered
Chosen Option : 2

Q.16 A chair was purchased for ₹785 and sold at a profit of 22%. What was the selling price?

- Ans
- 1. ₹987.4
 - 2. ₹768.3
 - 3. ₹857.9
 - 4. ₹957.7

Question ID : 8161611212
Status : Answered
Chosen Option : 4

Q.17 A man buys 2 apples and 3 kiwi fruits for ₹37. If he buys 4 apples and 5 kiwi fruits for ₹67, then what will be the total cost of 1 apple and 1 kiwi fruit?

- Ans
- 1. ₹20
 - 2. ₹28
 - 3. ₹18
 - 4. ₹15

Question ID : 8161611221
Status : Answered
Chosen Option : 4

Q.18 P and Q can finish a work in 10 days and 5 days, respectively. Q worked for 2 days and left the job. In how many days can P alone finish the remaining work?

- Ans
- 1. 4 days
 - 2. 10 days
 - 3. 6 days
 - 4. 8 days

Question ID : 8161611207
Status : Answered
Chosen Option : 3

Q.19 A car travels 105 km in 3 hours and a train travels 252 km in 4 hours. The ratio of speed of the car to that of the train is:

- Ans
- 1. 2 : 7
 - 2. 3 : 5
 - 3. 9 : 11
 - 4. 5 : 9

Question ID : 8161611214
Status : Answered
Chosen Option : 4

Q.20 $(\sin \theta + \cos \theta)^2 = 2$, $0^\circ < \theta < 90^\circ$, then the value of θ is:

- Ans
- 1. 0
 - 2. $\frac{\pi}{2}$
 - 3. π
 - 4. $\frac{\pi}{4}$

Question ID : 8161611227
Status : Answered
Chosen Option : 4

Q.21 The length and breadth of a rectangle are in the ratio 5 : 3. If the length is 8 m more than the breadth, what is the area of the rectangle?

- Ans
- 1. 240 m²
 - 2. 380 m²
 - 3. 360 m²
 - 4. 400 m²

Question ID : 8161611219
Status : Answered
Chosen Option : 1

Q.22 If $\operatorname{cosec} A = \frac{25}{7}$, then what is the value of $\tan A$?

- Ans
- ✓ 1. $\frac{7}{24}$
 - ✗ 2. $\frac{25}{24}$
 - ✗ 3. $\frac{7}{25}$
 - ✗ 4. $\frac{24}{25}$

Question ID : 8161611225
Status : Answered
Chosen Option : 1

Q.23 Find the volume (in cm^3) of a sphere whose radius is 7.5 cm.

- Ans
- ✓ 1. 1767.85
 - ✗ 2. 1985.23
 - ✗ 3. 1683.25
 - ✗ 4. 1489.12

Question ID : 8161611209
Status : Answered
Chosen Option : 1

Q.24 A triangle is NOT said to be a right-angled triangle if its sides measure:

- Ans
- ✗ 1. 5 cm, 12 cm and 13 cm
 - ✓ 2. 5 cm, 7 cm and 9 cm
 - ✗ 3. 6 cm, 8 cm and 10 cm
 - ✗ 4. 3 cm, 4 cm and 5 cm

Question ID : 8161611218
Status : Answered
Chosen Option : 2

Q.25 Which of the following numbers is divisible by 4?

- Ans
- ✗ 1. 954782
 - ✓ 2. 674536
 - ✗ 3. 897654
 - ✗ 4. 267834

Question ID : 8161611223
Status : Answered
Chosen Option : 2

Q.1 Which country has ordered to kill camels due to drought in January 2020?

- Ans
- 1. Australia
 - 2. India
 - 3. Africa
 - 4. United Arab Emirates

Question ID : 8161611236
Status : Answered
Chosen Option : 1

Q.2 How many districts are there in the Union Territory of Ladakh?

- Ans
- 1. 2
 - 2. 3
 - 3. 1
 - 4. 4

Question ID : 8161611246
Status : Answered
Chosen Option : 1

Q.3 What is the value of g? (g stands for acceleration due to gravitational force of the earth)

- Ans
- 1. 5.2 m/s^2
 - 2. 9.8 m/s^2
 - 3. 7.8 m/s^2
 - 4. 6.7 m/s^2

Question ID : 8161611243
Status : Answered
Chosen Option : 2

Q.4 The Kumaon Himalayas lie between which two rivers?

- Ans
- 1. Kali-Tista
 - 2. Satluj-Kali
 - 3. Tista-Dihang
 - 4. Indus-Satluj

Question ID : 8161611245
Status : Not Answered
Chosen Option : --

Q.5 The words 'Satyameva Jayate' on the state emblem has been taken from which Upanishad?

- Ans
- 1. Katha
 - 2. Prasna
 - 3. Kena
 - 4. Mundaka

Question ID : **8161611234**
Status : **Answered**
Chosen Option : **4**

Q.6 When was the right to property removed from the list of fundamental rights?

- Ans
- 1. 1975
 - 2. 1980
 - 3. 1978
 - 4. 1977

Question ID : **8161611252**
Status : **Not Answered**
Chosen Option : **--**

Q.7 The period of 12th Five Year Plan was:

- Ans
- 1. 2012-2017
 - 2. 2007-2012
 - 3. 2002-2007
 - 4. 1997-2002

Question ID : **8161611240**
Status : **Answered**
Chosen Option : **3**

Q.8 Where is the headquarters of South Western Railway?

- Ans
- 1. Hubli
 - 2. Chennai
 - 3. Kolkata
 - 4. Secunderabad

Question ID : **8161611247**
Status : **Answered**
Chosen Option : **4**

Q.9 Vitamin B Complex consists of how many vitamins?

- Ans
- 1. 5
 - 2. 8
 - 3. 6
 - 4. 7

Question ID : 8161611241
Status : Answered
Chosen Option : 2

Q.10 Who was the founder of Pala Dynasty?

- Ans
- 1. Dharampala
 - 2. Mahipala
 - 3. Ramapala
 - 4. Gopala

Question ID : 8161611248
Status : Not Answered
Chosen Option : --

Q.11 Who wrote the book 'An era of Darkness'?

- Ans
- 1. Jerry Pinto
 - 2. Anees Salim
 - 3. Shashi Tharoor
 - 4. Mamang Dai

Question ID : 8161611251
Status : Answered
Chosen Option : 3

Q.12 Which shortcut key is used for previewing the page before printing?

- Ans
- 1. CTRL + F6
 - 2. CTRL + F10
 - 3. CTRL + F2
 - 4. CTRL + F5

Question ID : 8161611232
Status : Not Answered
Chosen Option : --

Q.13 'Karmayoddha Granth' has been written on the life of:

- Ans
- 1. Subash Chandra Bose
 - 2. Mahatma Gandhi
 - 3. Narendra Modi
 - 4. Manmohan Singh

Question ID : 8161611237
Status : Answered
Chosen Option : 3

Q.14 Where is the Sultan Azlan Shah Cup held every year?

- Ans
- 1. Malaysia
 - 2. India
 - 3. South Korea
 - 4. Germany

Question ID : 8161611254
Status : Answered
Chosen Option : 2

Q.15 India signed Panchsheel Treaty with which country?

- Ans
- 1. Nepal
 - 2. Pakistan
 - 3. China
 - 4. Bangladesh

Question ID : 8161611253
Status : Answered
Chosen Option : 3

Q.16 Where was the Pullela Gopichand Badminton Academy founded in 2008?

- Ans
- 1. New Delhi
 - 2. Bangalore
 - 3. Hyderabad
 - 4. Mumbai

Question ID : 8161611255
Status : Not Answered
Chosen Option : --

Q.17 Atomic number of copper is:

- Ans
- 1. 23
 - 2. 25
 - 3. 28
 - 4. 29

Question ID : 8161611242
Status : Answered
Chosen Option : 4

Q.18 Nobel Peace Prize 2019 winner Abiy Ahmed Ali belongs to which country?

- Ans
- 1. UAE
 - 2. Ethiopia
 - 3. Pakistan
 - 4. Brazil

Question ID : 8161611250
Status : Answered
Chosen Option : 2

Q.19 Who has been elected as the new Jharkhand assembly speaker?

- Ans
- 1. Inder Singh Namdhari
 - 2. Rabindra Nath Mahto
 - 3. Alamgir Alam
 - 4. CP Singh

Question ID : 8161611238
Status : Answered
Chosen Option : 2

Q.20 When was the Indian Reform Association formed?

- Ans
- 1. 1885
 - 2. 1870
 - 3. 1860
 - 4. 1865

Question ID : 8161611249
Status : Not Answered
Chosen Option : --

Q.21 Minimum Support Price (MSP) of the agricultural crops in India is fixed by the government on the recommendations of the:

- Ans
- 1. Reserve Bank of India
 - 2. Commission for Agricultural Costs and Prices (CACP)
 - 3. Food Corporation of India (FCI)
 - 4. NABARD

Question ID : 8161611239
Status : Answered
Chosen Option : 2

Q.22 Hirakud dam is in which state?

- Ans
- 1. Odisha
 - 2. Maharashtra
 - 3. Karnataka
 - 4. Rajasthan

Question ID : 8161611244
Status : Answered
Chosen Option : 1

Q.23 Which company manufactured the first microprocessor 4004?

- Ans
- 1. ENOcean Private Company
 - 2. NVIDIA Corporation
 - 3. PLX Devices
 - 4. INTEL Corporation

Question ID : 8161611233
Status : Not Answered
Chosen Option : --

Q.24 When was the construction of the Rashtrapati Bhavan completed?

- Ans
- 1. 1929
 - 2. 1953
 - 3. 1949
 - 4. 1959

Question ID : 8161611235
Status : Answered
Chosen Option : 1

Q.25 When did Karnam Malleshwari get the Padma Shri?

Ans 1. 1999

2. 1995

3. 1994

4. 2000

Question ID : 8161611256

Status : Not Answered

Chosen Option : --



Latest Sarkari jobs, Govt Exam alerts, Results and Vacancies

- ▶ Latest News and Notification
- ▶ Exam Paper Analysis
- ▶ Topic-wise weightage
- ▶ Previous Year Papers with Answer Key
- ▶ Preparation Strategy & Subject-wise Books

To know more [Click Here](#)



www.prepp.in