



Practice, Learn and Achieve
Your Goal with Prepp

SSC GD Exam

Previous Paper

Simplifying
Government Exams

 SSC CHSL	 IAS EXAM	 RRB NTPC	 NTSE	 CDS
 SSC CGL	 CBSE UGC NET	 IBPS PO	 NDA	
 SBI PO	 IBPS CLERK	 AFCAT	 SSC JE	 CTET
 CSIR UGC NET	 CAPF	 IBPS RRB		

Reasoning

Instructions

For the following questions answer them individually

Question 1

Select the option that is related to the third term in the same way as the second term is related to the first term.

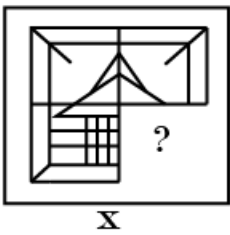
Larva : Insect :: Lamb : ?

- A Sheep
- B Deer
- C Lion
- D Child

Answer: A

Question 2

Select a figure from amongst the four alternatives that when placed in the blank space (?) of figure X will complete the pattern. (Rotation is NOT allowed).



- A
- B
- C
- D

Answer: D

Question 3

Select the option that is related to the third term in the same way as the second term is related to the first term.

Myanmar : Kyat :: Pakistan : ?

- A Rial
- B Dirham
- C Rupee
- D Dinar

Answer: C

Question 4

Choose the odd one out of the given options.

- A LHE
- B JPC
- C BFQ
- D DEP

Answer: B

Question 5

Eight friends A, B, C, D, E, F, G and are sitting around a circular table facing each other for a lunch. A is opposite F and third to the right of B. G is between F and D. H is to the left of D. E is between C and A. Who is sitting third to the right of C?

- A D
- B G
- C H
- D A

Answer: C

Question 6

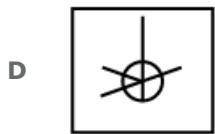
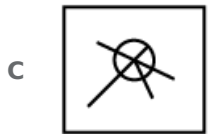
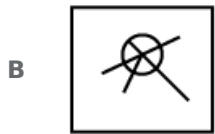
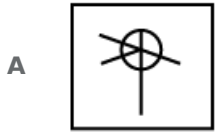
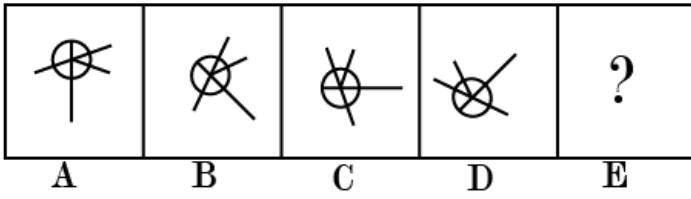
In a certain code, UNHAPPY is written as PPYAHNU. How will FALLACY be written in that code?

- A ACYLAAF
- B ACYLLAF
- C YCALLAF
- D ACYLALF

Answer: B

Question 7

Choose the option that would follow next in the given figure series.



Answer: D

Question 8

Choose the odd one out of the given options.

- A Owl
- B Crow
- C Ostrich
- D Eagle

Answer: C

Question 9

The statements below are followed by two conclusions labeled I and II. Assuming that the information in the statements is true, even if it appears at variance with generally established facts, decide which conclusion(s) logically and definitely follow(s) from the information given in the statements.

Statements:

1.) Some guns are spiders.

2.) Some spiders are peasants.

Conclusion

I. Some guns are peasants.

II. Some peasants are guns.

A Only conclusion II follows.

B Only conclusion I follows.

C Neither conclusion I nor conclusion II follows.

D Both conclusions follow.

Answer: C

Question 10

Find out the two signs to be interchanged to make the following equation correct.

$$22 + 11 \times 22 - 2 \div 3 = 45$$

A + and \div

B \times and \div

C - and \times

D - and \div

Answer: A

Question 11

Which number will follow next in the given number series?

8, 9, 17, 44, ?

A 103

B 105

C 108

D 100

Answer: C

Question 12

Select the option that is related to the third term in the same way as the second term is related to the first term.

ACG: DFD :: CIU : ?

A LFR

- B FLR
- C RLL
- D EGF

Answer: B

Question 13

Select the correct option that will fill in the blank and complete the series.

NIX. LKV, JMT, HOR,

- A FOP
- B FQP
- C FQQ
- D FQO

Answer: B

Question 14

J, K L, M, N and O are six teachers. Each one teaches a different subject out of Hindi, English, Math, Science, Social Science and Arts, NOT necessarily in the same order. Each of them teaches on only one day, from Monday to Saturday. NOT necessarily in the same order. J teaches Arts on Saturday. L teaches neither English nor Social Science, but he teaches on Thursday. Wednesday is reserved for Maths taught by K. O teaches Science a day before N. Social Science is taught a day before Arts. Who teaches Social Science?

- A J
- B M
- C N
- D O

Answer: B

Question 15

In a certain code, SPADE is written as 45. How will ABODE be written in that code?

- A 59
- B 39
- C 29
- D 27

Answer: D

Question 16

Choose the odd number out of the given options.

- A 545
- B 314
- C 718
- D 415

Answer: A

Question 17

Select the option that will correctly replace the question mark (?) in the given pattern.

5	15	6
7	5	?
32	230	42

- A 9
- B 11
- C 13
- D 6

Answer: D

Question 18

Choose the option that most closely resembles the mirror image of the given word when mirror is placed at right side.

SEQUEL

- A LEUᵀE2
- B SEᵀUEᵀ
- C SEᵀUE2
- D LEUᵀE2

Answer: C

Question 19

Which number will follow next in the given number series?
3, 16, 29, 42, ?

- A 57
- B 55

C 54

D 61

Answer: B

Question 20

Select the option that is related to the third number in the same way as the second number is related to the first number.

22 : 625 :: 13 : ?

A 144

B 221

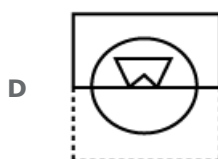
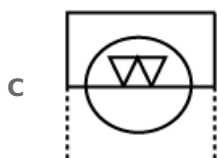
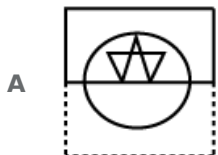
C 256

D 169

Answer: C

Question 21

A square transparent sheet with a pattern is given. How will the pattern appear when the transparent sheet is folded along the dotted line?



Answer: C

Question 22

Seven friends O, P, Q, R, S, T and U are watching a movie sitting in a row. S is sitting at one extreme end. is sitting second to the right of S. P is sitting between O and Q. U is NOT sitting at any extreme end. is sitting to the left of T. Who is sitting at the extreme left end?

- A S
- B Q
- C R
- D P

Answer: A

Question 23

The statements below are followed by two conclusions labeled I and II. Assuming that the information in the statements is true, even if it appears to be at variance with generally established facts, decide which conclusion(s) logically and definitely follow(s) from the information given in the statements.

Statements:

- 1.) All pupils are crows.
- 2.) All cats are crows.

Conclusion

- I. Some cats are pupils.
- II. No cat is pupil.

- A Only conclusion II follows.
- B Both conclusions follow.
- C Only conclusion I follows.
- D Either conclusion I or conclusion II follows.

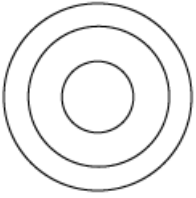
Answer: D

Question 24

Select the Venn diagram that best represents the given set of classes.
Nepal, Asia, Kathmandu



D



Answer: D

Question 25

Choose the option in which the figure marked 'X' is embedded.



A



B



C



D



Answer: A

General knowledge

Instructions

For the following questions answer them individually

Question 26

Which of the following is NOT a classical dance form?

A Kalbeliya

B Kathakali

C Odissi

D Kathak

Answer: A

Question 27

Saikhom Mirabai Chanu received the Padma Shri award in 2018, for

A athletics

B weight lifting

C wrestling

D cricket

Answer: B

Question 28

In India, states with of population get more representatives.

A Lower Income

B Small Size

C Higher Income

D Larger size

Answer: D

Question 29

The pen name of Sampooran Singh Kalra, an Indian poet, lyricist and film director is

A Arzu

B Daagh

C Gulzar

D Taalib

Answer: C

Question 30

..... is the harvest festival of Kerala.

A Baisakhi

B Pongal

C Lohri

D Onam

Answer: D

Question 31

..... is the highest military decoration awarded for displaying distinguished acts of valour during war.

- A** Mahavir Chakra
- B** Sena Medal
- C** Param Vir Chakra
- D** Shaurya Chakra

Answer: C

Question 32

Among the following options, is the highest mountain peak of the Himalayas in India.

- A** Nanda Devi
- B** Namcha Barwa
- C** Mount Everest
- D** Kanchenjunga

Answer: D

Question 33

..... is the best conductor of heat.

- A** Lead
- B** Mercury
- C** Silver
- D** Stainless steel

Answer: C

Question 34

What is the name of the first mammal clone (sheep)?

- A** Polly
- B** Dolly
- C** Shan
- D** Sheep

Answer: B

Question 35

Who was the only Pakistani national who was awarded the Bharat Ratna?

- A** Khan Abdul Ghaffar Khan
- B** Nawaz Sharif
- C** Benazir Bhutto
- D** Imran Khan

Answer: A

Question 36

After Independence, became India's first Deputy Prime Minister.

- A** Sardar Vallabhai Patel
- B** Charan Singh
- C** Jajjivan Ram
- D** Morarji Desai

Answer: A

Question 37

The green revolution did NOT include:

- A** use of well-developed system of irrigation.
- B** upgradation of the roads of the village.
- C** use of advanced technology in farming.
- D** high yielding varieties of seeds.

Answer: B

Question 38

The vast meadows in the high elevation ranges of the Himalayas are called

- A** Bhabar
- B** Maru
- C** Bugyal
- D** Green meadows

Answer: C

Question 39

Garba is a folk dance which originated in

- A** Gujarat
- B** Maharashtra
- C** Rajasthan
- D** Bihar

Answer: A

Question 40

Zamindari System was introduced by in 1793.

- A** Clint
- B** Curzon
- C** Cornwallis
- D** Clive

Answer: C

Question 41

The brain is a part of the system.

- A** circulatory
- B** digestive
- C** endocrine
- D** nervous

Answer: D

Question 42

..... river is the only natural water source that drains inside a lake in the desert.

- A** Teesta
- B** Ganga
- C** Kali
- D** Luni

Answer: D

Question 43

The Bharatiya Janata Party's (BJP) origins lie in the Bharatiya Jana Sangh, founded by

- A Syama Prasad Mukherjee
- B Lal Krishna Advani
- C Atal Bihari Vajpayee
- D Murli Manohar Joshi

Answer: A

Question 44

'Deuce' is a term associated with

- A baseball
- B cricket
- C hockey
- D lawn tennis

Answer: D

Question 45

Which of the following are NOT Trade Barriers?

- A Subsidies
- B Embargo
- C Export Security
- D Tariff Barriers

Answer: C

Question 46

..... is called 'the power house of the cell'.

- A Cell membrane
- B Nucleus
- C Mitochondria
- D Golgi bodies

Answer: C

Question 47

..... is the largest democracy the world.

- A Sweden
- B Iceland

- C India
- D Norway

Answer: C

Question 48

What does PMGY stands for?

- A Pradhan Mantri Gramodaya Yojana
- B Pradhan Mantri Gareeb Yojana
- C Pradhan Mantri Gurukul Yojana
- D Pradhan Mantri Gram Yojana

Answer: A

Question 49

..... is responsible for oxygen transportation in humans.

- A Mucus
- B Melanin
- C Lymph
- D Haemoglobin

Answer: D

Question 50

The swampy belt of the northern Indian plains is known as

- A Terai
- B Doab
- C Bhangra
- D Khadar

Answer: A

Quant

Instructions

For the following questions answer them individually

Question 51

The average of numbers N1 and N2 is 17. The average of numbers N2 and N3 is 44. What is the difference between N3 and N1?

- A 54
- B 35
- C 27
- D 36

Answer: A

Question 52

An article is sold for 2 5845 after giving discount of 12.5%. What is the marked price of article?

- A ₹6800
- B ₹6700
- C ₹6600
- D ₹6680

Answer: D

Question 53

A sum becomes 8 times of itself in 7 years at the rate of compound interest (interest is compounded annually). In how many years will the sum becomes 4096 times of itself?

- A 28
- B 24
- C 56
- D 16

Answer: A

Question 54

If cost price of an article is ₹ 1240 and loss is 32%, then what will be the selling price of the article?

- A ₹820.62
- B ₹843.20
- C ₹780.72
- D ₹759.60

Answer: B

Question 55

If $s : u : v : w = 2 : 9 : 6 : 7$ and $s + u + v + w = 864$, then what is the value of $s + u + w$?

- A 612
- B 648
- C 734
- D 722

Answer: B

Question 56

16 workers working 8 hours per day can demolish a building in 32 days. In how many days 24 workers working 12 hours per day can demolish the same building?

- A $\frac{128}{3}$ days
- B $\frac{56}{3}$ days
- C $\frac{128}{9}$ days
- D $\frac{56}{9}$ days

Answer: C

Question 57

The bar chart given below shows the ratio of expenditure to revenue for seven consecutive years Y1, Y2, Y3, Y4, Y5, Y6 and Y7.



Revenue for year Y4 is ₹ 22500. What is the profit for year Y4?

- A ₹2750
- B ₹2250
- C Cannot be determined
- D ₹2500

Answer: B

Question 58

The data below shows the number of students in class A having secured different marks.

Marks	Students in class A
0-2	3
2-4	4
4-6	1
6-8	1
8-10	1
10-12	0

What is the mean marks of class A?

- A 2
- B 3.8
- C 2.8
- D 1.6

Answer: B

Question 59

The Least Common Multiple and Highest Common Factor of two numbers are 75 and 5 respectively. If their difference is 10, then what will be the sum of these two numbers?

- A 20
- B 25
- C 30
- D 40

Answer: D

Question 60

What is the value of $(5 \div \frac{1}{5} \text{ of } \frac{25}{4} + \frac{20}{3} \div \frac{100}{9})$?

- A $\frac{31}{5}$
- B $\frac{27}{5}$
- C $\frac{23}{5}$
- D $\frac{18}{5}$

Answer: C

Question 61

Height of a right circular cone is 28 cm. If diameter of its base is 42 cm, then what will be the curved surface area of the cone?

- A 4620 cm^2
- B 2310 cm^2
- C 1540 cm^2
- D 170 cm^2

Answer: B

Question 62

What is the value of $\left[\frac{4}{5} \div \frac{5}{8} - \frac{7}{5} + \frac{2}{15} \text{ of } \left(\frac{3}{2} \div \frac{4}{5}\right)\right]$?

- A $\frac{21}{100}$
- B $\frac{13}{100}$
- C $\frac{15}{29}$
- D $\frac{17}{80}$

Answer: B

Question 63

A train is moving with a uniform speed. Train crosses a bridge of length 340 meters in 35 seconds and a bridge of length 460 meters in 38 seconds. What is the speed of the train?

- A 72 km/hr
- B 80 km/hr
- C 40 km/hr
- D 144 km/hr

Answer: D

Question 64

The sides of a triangle are in the ratio 5 : 2 : 1. If the perimeter of the triangle is 88 cm, then what will be the length of the largest side?

- A 38 cm
- B 40 cm
- C 44 cm
- D 55 cm

Answer: D

Question 65

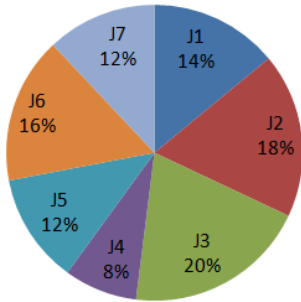
If Rohit alone can complete one-fourth of a work in 32 days, then in how many days Rohit alone can complete the whole work?

- A 96 days
- B 128 days
- C 64 days
- D 118 days

Answer: B

Question 66

The pie chart given below shows the time taken in 7 different procedures J1, J2, J3, J4, J5, J6 and J7 in making a car as a percentage of total time taken. The total time taken in making one car is 1200 hours.



What is the average time taken in procedures J3, J6 and J7?

- A 180 hours
- B 192 hours
- C 168 hours
- D 204 hours

Answer: B

Question 67

If cost price of 80 articles is equal to the selling price of 50 articles, then what will be the profit percentage?

- A 25%
- B 40%
- C 60%
- D 37.5%

Answer: C

Question 68

The volume of a right circular cone is equal to the volume of that right circular cylinder whose height is 48 cm and diameter of its base is 20 cm. If the height of the cone is 16 cm, then what will be the diameter of its base?

- A 25 cm

- B 45 cm
- C 60 cm
- D 130 cm

Answer: C

Question 69

A sum of ₹ 12500 gives interest of ₹ 5625 in T years at simple interest. If the rate of interest is 7.5%, then what will be the value of T?

- A 5 years
- B 6 years
- C 7 years
- D 8 years

Answer: B

Question 70

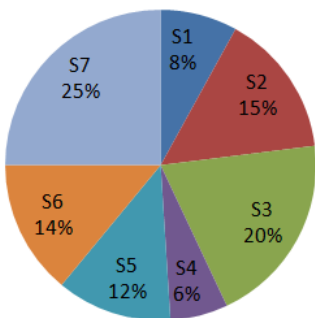
Speed of Deepak and Vinod are in the ratio of 19 : 12 respectively. If speed of Vinod is 84 kny/hr, then what will be the speed of Deepak?

- A 114 km/hr
- B 117 km/hr
- C 126 knv/hr
- D 133 km/hr

Answer: D

Question 71

The pie chart given below shows the annual snowfall received by 7 states of a country. The snowfall is shown as a percentage of total annual snowfall of the country.



If the annual snowfall received by the country is 700 cm, then what is the monthly snowfall received by S5?

- A 7 cm
- B 5 cm

C 21 cm

D 12 cm

Answer: A

Question 72

If X is 30% less than Y and Z is 50% less than Y, then Z is how much percentage less than Y?

A 80%

B 95%

C 65%

D 75%

Answer: C

Question 73

If Dheeraj can cross a 100 metres wide road in 25 seconds, then what is the speed of Dheeraj?

A 12 m/s

B 6 m/s

C 14 m/s

D 4 m/s

Answer: D

Question 74

If $2A = 3B = 7C$, then what is the ratio of A: B: C?

A 21 : 14 : 6

B 14 : 10 : 21

C 21 : 10 : 6

D 2 : 3 : 7

Answer: A

Question 75

The average daily rainfall of town A is 105 for first 2 days of the week, 84 for next 3 days and 49 for the last 2 days of the week. The total weekly rainfall for town B is 455. What will be the average daily rainfall of both the towns together?

A 138

B 152

C 159

D 145

Answer: D

English

Instructions

For the following questions answer them individually

Question 76

Select the most appropriate option to substitute the underlined segment in the given sentence. If there is no need to substitute it, select No Improvement.

He spent all which he has in order to perfect his invention.

- A which he has
- B what he is having
- C that he had
- D No Improvement

Answer: C

Question 77

Select the most appropriate option to substitute the underlined segment in the given sentence. If there is no need to substitute it, select No Improvement

The Finance Minister has announce big schemes for farmers, women and unorganized workers in his Budget speech.

- A No Improvement
- B has announced
- C has been announcing
- D have announced

Answer: B

Question 78

Select the word which means the same as the group of words given.

The life history of a person written by himself

- A Fiction
- B Biography
- C Novel
- D Autobiography

Answer: D

Question 79

Select the most appropriate **ANTONYM** of the given word.
SEMBLANCE

- A Simile
- B Guise
- C A likeness
- D Difference

Answer: D

Question 80

Select the most appropriate meaning of the idiom.
To burn all bridges

- A To chase all enemies
- B To light a fire
- C To damage a path
- D To destroy all relations

Answer: D

Question 81

Select the most appropriate option to substitute the underlined segment in the given sentence. If there is no need to substitute it, select **No Improvement**.

Subhash Palekar a farmer received the Padma Shri award this year in his campaign for zero budget natural farming.

- A at his campaign with zero budget
- B for his campaign for zero budget
- C for his campaign to zero budget
- D No Improvement

Answer: B

Question 82

Select the word which means the same as the group of words given.
Something never done or known before

- A Unprecedented
- B Unanimous
- C Unconditioned
- D Uncanny

Answer: A

Question 83

Select the most appropriate word to fill in the blank.

A house to house survey was conducted to register more than seventeen crore voters.

- A** wearily
- B** punctually
- C** meticulously
- D** firmly

Answer: C

Question 84

Identify the segment in the sentence which contains the grammatical error from the given options. This bottle must not be make to stand closeto the fire.

- A** must not be
- B** close to the fire
- C** This bottle
- D** make to stand

Answer: D

Instructions

In the following passage some words have been deleted. Fill in the blanks with the help of the alternatives given.
Passage:

Science has made an (1)..... contribution to the relief of humansuffering, and humanity (2)..... a deep (3)..... of gratitude to scientists whose (4)..... and sacrifices have led to many (5)..... discoveries and inventions.

Question 85

Fill in the blank (1) with the most appropriate option.

- A** excessive
- B** intensive
- C** enterprising
- D** enormous

Answer: D

Question 86

Fill in the blank (2) with the most appropriate option.

- A offers
- B feels
- C thinks
- D owes

Answer: B

Question 87

Fill in the blank (3) with the most appropriate option.

- A feeling
- B sense
- C amount
- D fund

Answer: B

Question 88

Fill in the blank (4) with the most appropriate option.

- A discoveries
- B labour
- C success
- D achievements

Answer: B

Question 89

Fill in the blank (5) with the most appropriate option.

- A unusual
- B dynamic
- C useful
- D curious

Answer: C

Instructions

For the following questions answer them individually

Question 90

Identify the segment in the sentence which contains the grammatical error from the given options. When he returned to the dining-room the guests left and the servants were clearing the tables.

- A to the dining-room
- B When he
- C the guests left
- D were clearing

Answer: C

Question 91

**Select the most appropriate ANTONYM of the given word.
RAMBLING**

- A Deceptive
- B Coherent
- C Irregular
- D Confused

Answer: B

Question 92

**Fill in the blank with the most appropriate word.
Miserly people find it difficult to part any of their money for charitable purposes.**

- A with
- B from
- C about
- D for

Answer: A

Question 93

**Select the most appropriate meaning of the given idiom.
Storm in a teacup**

- A A grand get-together
- B A big fuss over a small issue
- C A highly risky business
- D A stormy tea party

Answer: B

Question 94

**Fill in the blank with the most appropriate word.
Reason is the highest faculty on man by his creator.**

- A donated
- B given
- C bestowed
- D endowed

Answer: C

Question 95

Identify the segment in the sentence which contains the grammatical error from the given options.
He was deprived from the benefits of college education owing to the death of his father.

- A college education
- B He was deprived from
- C the benefits of
- D owing to

Answer: B

Question 96

Select the synonym of the given word.

IMITATION

- A Genuine
- B Real
- C Artificial
- D Different

Answer: C

Question 97

Select the most appropriate word to fill in the blank.

I would rather serve

- A but to beg
- B than to beg
- C but beg
- D than beg

Answer: D

Question 98

Select the synonym of the given word.

FACADE

- A** Elevation
- B** Interior
- C** Frontage
- D** Ceiling

Answer: C

Question 99

Select the correctly spelt word

- A** Discrepancy
- B** Descrepancy
- C** Discrepency
- D** Discripancy

Answer: A

Question 100

Select the correctly spelt word.

- A** Liesure
- B** Leisure
- C** Leisour
- D** Lisure

Answer: B



Latest Sarkari jobs, Govt Exam alerts, Results and Vacancies

- ▶ Latest News and Notification
- ▶ Exam Paper Analysis
- ▶ Topic-wise weightage
- ▶ Previous Year Papers with Answer Key
- ▶ Preparation Strategy & Subject-wise Books

To know more [Click Here](#)



www.prepp.in