


















Practice, Learn and Achieve
Your Goal with Prepp

SSC GD Exam

Previous Paper

Simplifying
Government Exams

 SSC CHSL	 IAS EXAM	 RRB NTPC	 NTSE	 CDS
 SSC CGL	 CBSE UGC NET	 IBPS PO	 NDA	
 SBI PO	 IBPS CLERK	 AFCAT	 SSC JE	 CTET
 CSIR UGC NET	 CAPF	 IBPS RRB		

Reasoning

Instructions

For the following questions answer them individually

Question 1

Select the correct option that will fill in the blank and complete the series.

R, U, X, A,

A D

B F

C T

D C

Answer: A

Question 2

The statements below are followed by two conclusions labeled I and II. Assuming that the information in the statements is true, even if it appears to be at variance with generally established facts, decide which conclusion(s) logically and definitely follow(s) from the information given in the statements.

Statements:

All bangles are rings.

Some rings are toys.

Some toys are dolls.

Conclusions:

I. Some rings are bangles.

II. Some dolls are rings.

A Either conclusion I or II follows

B Neither conclusion I nor II follows

C Only conclusion I follows

D Only conclusion II follows

Answer: C

Question 3

Select the correct option that will fill in the blank and complete the series.

12, 14, 17, 15, 22, 16,

A 18

B 27

C 17

D 30

Answer: B

Question 4

Select the option that is related to the third term in the same way as the second term is related to the first term.

EER : RFE :: DJT : ?

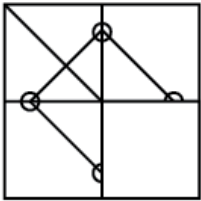
- A TJD
- B DTJ
- C TDJ
- D JTD

Answer: A

Question 5

Which of the following answer figure will complete the given figure?

Question Figure:



- A
- B
- C
- D

Answer: D

Question 6

In a certain code, MISSION is coded as MISSJPN, then how is LIBRARY coded in the same way?

- A LJBRYRB
- B LBKRBRZ
- C LKBRBRZ

D LJBRRY

Answer: D

Question 7

If GLOBALLY is written as 61374118 and CITY as 2958, how will BOAT be written?

A 7365

B 7345

C 7354

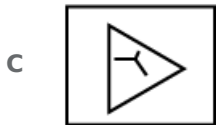
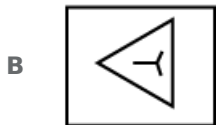
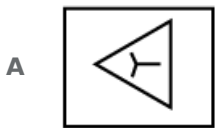
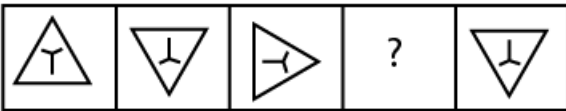
D 7321

Answer: B

Question 8

Choose the option which completes the given figure series

PROBLEM FIGURES



Answer: A

Question 9

Select the related word pair from the given alternatives.

Roger Federer : Tennis :: :

A Pullela Gopichand : badminton

B Prakash Padukone : Tennis

- C Ricky Ponting : Football
- D Cristiano Ronaldo : Cricket

Answer: A

Question 10

Select the option that is related to the Third term in the same way as the second term is related to the first term.

20 : 25 :: 8 : ?

- A 6
- B 10
- C 7
- D 9

Answer: B

Question 11

Mona, Kanak, John, Honey, Isha and Lara are watching a movie in a theater which has screen in the north. They are sitting in certain way.

- (i) Only Kanak is sitting between Honey and John.
- (ii) Lara is to the right of Mona who is sitting at extreme left.
- (iii) Isha is to the immediate right of John.

Who is sitting between Kanak and Lara?

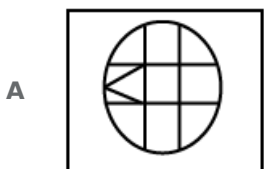
- A Honey
- B John
- C Isha
- D Mona

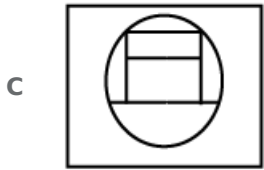
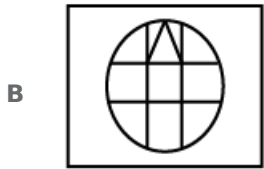
Answer: A

Question 12

Choose the option figure in which the problem figure is hidden/embedded.

Problem Figure:

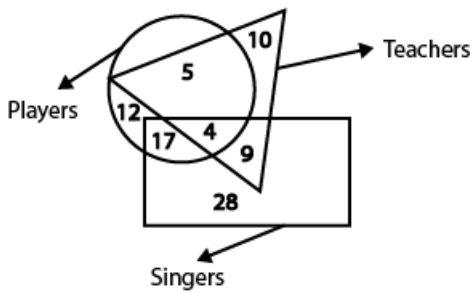




Answer: D

Question 13

In the given Venn diagram which number shows players who are neither Teachers nor Singers?



- A** 5
- B** 17
- C** 4
- D** 12

Answer: D

Question 14

Find the missing number from the below options.

64	125	216	343
216	405	512	?

- A** 1071
- B** 1324

C 1096

D 1051

Answer: A

Question 15

If 'L' means ' \times ', 'N' means '+', 'O' means ' \div ', and 'M' means '-', then:

$$1000 \text{ O } 5 \text{ N } 66 \text{ M } 33 = ?$$

A 433

B 333

C 483

D 233

Answer: D

Question 16

Four options have been given out of which three are alike in some manner, while one is different. Choose the odd one.

A 16-81

B 49-64

C 4-9

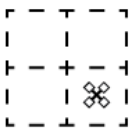
D 25-36

Answer: A


Question 17

A piece of paper is folded in the manner shown in the question figure(s). Select the figure out of the answer choices showing the unfolded pattern after the punches (cut).

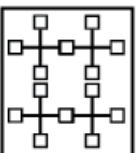
Question Figure:




A



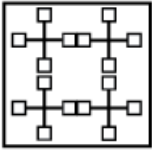
B



C



D



Answer: A

Question 18

Select the related word pair from the given alternatives.

Book : Pages :: :

- A Hand : Finger
- B Neck : Collar
- C Tie : Shirt
- D Socks : Feet

Answer: A

Question 19

Four letter clusters have been given, out of which three are alike in some manner, while one is different. Choose the odd one.

- A EAfg
- B eaWT
- C AUrs
- D vwOA

Answer: B

Question 20

Some children are sitting in a row facing north. Among those, Sameer is 17th from the left and second to the right of Jay, who is 15th from the right of the row, then how many children are there in the row?

- A 31
- B 29
- C 24
- D 30

Answer: B

Question 21

Four words have been given ,out of which three are alike in some manner, while one is different. Choose the odd one.

- A Parents
- B Siblings
- C Guardian
- D Ancestor

Answer: B

Question 22

The statements below are followed by two conclusions labeled I and II. Assuming that the information in the statements is true, even if it appears to be at variance with generally established facts, decide which conclusion(s) logically and definitely follow(s) from the information given in the statements.

Statements:

1. Some players are singers.
2. All singers are tall.
3. Some players are strong.

Conclusions:

- I. Some players are tall.
- II. All players are strong.

- A Neither conclusion I nor II follows
- B Only conclusion I follows
- C Only conclusion II follows
- D Either conclusion I or II follows

Answer: B

Question 23

Select the correct option that will fill in the blank and complete the series.

8, 13, 21, 38, 62, 99,

- A 126
- B 136
- C 147
- D 116

Answer: C

Question 24

A, B, C, D, E, F and G are sitting around a circle facing at the centre. D is third to the left of A who is second to the left of F. E is not a neighbour of either F or D. C is third to left of B. Who is sitting between G and B?

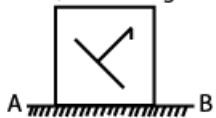
- A D only
- B F only
- C Both F and D
- D Data inadequate

Answer: B

Question 25

If a mirror is placed on the line AB, then which of the answer figures is the right image of the given figure?

Question Figure:



- A
- B
- C
- D

Answer: A

General knowledge

Instructions

For the following questions answer them individually

Question 26

Sikkim was associated with the Union of India by the amendment in 1975.

- A 36th
- B 1st
- C 24th
- D 12th

Answer: A

Question 27

Muga silk is the product of the silkworm, endemic to which state?

- A** Tamil Nadu
- B** Rajasthan
- C** Uttar Pradesh
- D** Assam

Answer: D

Question 28

Who is the first Indian female amputee to climb Mt. Everest?

- A** Malavath Purna
- B** Arati Saha
- C** Arunima Sinha
- D** Santosh Yadav

Answer: C

Question 29

The place where Dandi Salt March happened lies in the present-day state of:

- A** Delhi
- B** Gujarat
- C** Kashmir
- D** Kerala

Answer: B

Question 30

Colonial rulers struggled with educating the people in the colonies because:

- A** too much education could lead to higher obedience
- B** too much education could lead to revolt
- C** too little education could lead to higher disobedience
- D** too little education could lead to revolt

Answer: B

Question 31

Who founded the Holkar dynasty, one of the regional Maratha dynasties?

- A** Malhar Rao
- B** Raghuji
- C** Ramoji
- D** Damaji I

Answer: A

Question 32

As part of the fundamental rights, the Constitution of India guarantees the right to:

- A** divorce
- B** travel
- C** equality
- D** marriage

Answer: C

Question 33

Terylene is a type of:

- A** Polyester
- B** Acrylic
- C** Rayon
- D** Nylon

Answer: A

Question 34

Gregor Johann Mendel came up with the theory of inheritance by studying:

- A** animals
- B** people
- C** peas
- D** carrots

Answer: C

Question 35

The Ganges is approximately km long.

- A 5000
- B 2500
- C 1000
- D 2000

Answer: B

Question 36

In general, resistivity of an alloy its constituent metals.

- A has no correlation to
- B is higher than
- C is lower than
- D is same as

Answer: B

Question 37

People expect democracies to:

- A have differential weight in electing representatives
- B increase inequality
- C result in a poorer country
- D have equal weight in electing representatives

Answer: D

Question 38

The Chand Minar is located in:

- A Maharashtra
- B Madhya Pradesh
- C Uttar Pradesh
- D Kerala

Answer: A

Question 39

Limestone, chalk and marble are different forms of:

- A calcium carbonate
- B soda ash
- C sodium chloride
- D sugar

Answer: A

Question 40

The festival 'Me-Dam-Me-Phi' is celebrated by Tai-Ahom communities of which state?

- A Tripura
- B Mizoram
- C Manipur
- D Assam

Answer: D

Question 41

Who was the first Indian lady scientist who worked with organic chemistry and medicinal plant?

- A Asima Chatterjee
- B Arati Saha
- C Aruna Asaf Ali
- D Anusuya Sarabhai

Answer: A

Question 42

Buxa Tiger Reserve is located in:

- A Uttar Pradesh
- B Kerala
- C West Bengal
- D Andhra Pradesh

Answer: C

Question 43

The Sahitya Academy award in Hindi for 2017 was won by:

- A Rana Ayub
- B Ramesh Shah

C Nasira Sharma

D Ramesh Megh

Answer: D

Question 44

..... won the 2018 Football World Cup.

A Germany

B Brazil

C France

D Croatia

Answer: C

Question 45

In the 2018 Wimbledon, was the winner in the women's finals.

A Martina Hingis

B Venus Williams

C rena Williams

D Angelique Kerber

Answer: D

Question 46

India's GDP growth in 2017 was:

A 4.5%

B 6.6%

C 11.1%

D 8.8%

Answer: B

Question 47

Red algae are generally found in:

A mountains

B cities

C water bodies

D deserts

Answer: C

Question 48

In Economic terms, Globalization is the process of rapid between countries.

- A** Integration
- B** Competition
- C** Investment
- D** Change

Answer: A

Question 49

Belief in the primary importance of the self, the virtues of self-reliance and personal independence is referred to as in Economics.

- A** Federalism
- B** Frugalism
- C** Capitalism
- D** Individualism

Answer: D

Question 50

In India, district roads are maintained by:

- A** Zilla parishad
- B** state government
- C** central government
- D** panchayat

Answer: A

Quant

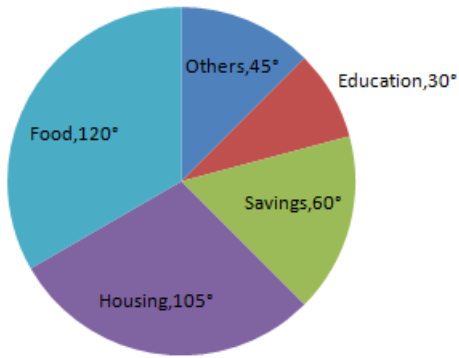
Instructions

For the following questions answer them individually

Question 51

Study the chart and answer the question based, on the pie chart.

The pie chart given below shows expenditures incurred by a family on various items and savings in a month. Savings of the family is ₹ 8,000 in a month.



What is the total expenditure of the family for the month?

- A ₹45,000
- B ₹48,000
- C ₹50,000
- D ₹40,000

Answer: D

Question 52

Nitin's money becomes double in 4 years at compound interest. In how many years will it become sixteen times at compound interest?

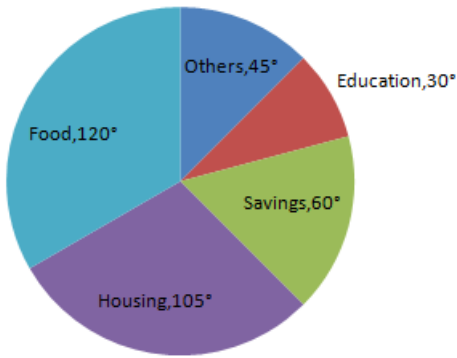
- A 20
- B 24
- C 16
- D 28

Answer: C

Question 53

Study the chart and answer the question based, on the pie chart.

The pie chart given below shows expenditures incurred by a family on various items and savings in a month. Savings of the family is ₹ 8,000 in a month.



How much more amount is spent on food than on housing?

- A ₹2,000
- B ₹3,000
- C ₹1,000
- D ₹2,500

Answer: A

Question 54

What approximate value should come in place of the question mark (?) in the following questions?

$$21 + 68 \div 17 = ?$$

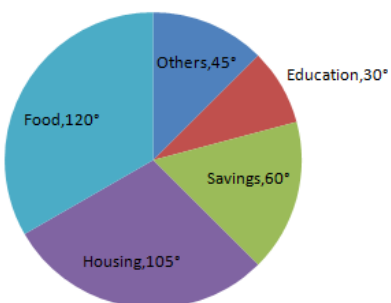
- A 25
- B 35
- C 40
- D 10

Answer: A

Question 55

Study the chart and answer the question based, on the pie chart.

The pie chart given below shows expenditures incurred by a family on various items and savings in a month. Savings of the family is ₹ 8,000 in a month.



The ratio of the expenditure on food to the savings is:

- A 2:1
- B 3:4
- C 3:2
- D 4:3

Answer: A

Question 56

If 10 persons can do a job in 20 days. Then 20 persons with the twice efficiency can do the same job in:

- A 15
- B 10
- C 5
- D 20

Answer: C

Question 57

25% of a number is 300. The number is:

- A 1000
- B 800
- C 1200
- D 900

Answer: C

Question 58

The average of numbers 2,4, 6,..... , 100 is:

- A 51
- B 50
- C 49.5
- D 50.5

Answer: A

Question 59

If $A : B = 2 : 3$, $B : C = 3 : 4$ and $C : D = 3 : 5$ then value of $A : B : C : D$ is:

- A 6 : 9 : 15 : 20
- B 2 : 3 : 4 : 5

- C 2 : 3 : 5 : 12
- D 6 : 9 : 12 : 20

Answer: D

Question 60

The average of 20, 25, 35, 15, a, 30 is 22.5. The value of a is:

- A 13
- B 12.5
- C 10
- D 15

Answer: C

Question 61

The marked price of an item for sale is ₹ 240. If two successive discounts of 10% and 5% are given on the marked price, then the selling price of the item (in ₹) will be:

- A ₹34.80
- B ₹205.20
- C ₹36
- D ₹204

Answer: B

Question 62

Two trains 85 m and 155 m long, run at the speeds of 62 km/h and 82 km/h respectively, in opposite directions on parallel tracks. The time which they take to cross each other is:

- A 4 seconds
- B 5 seconds
- C 6 seconds
- D 8 seconds

Answer: C

Question 63

The length, breadth and height of a room are in the ratio of 4 : 3 : 2. The cost of carpeting the floor at ₹ 10 per square meter is ₹ 480. The height of the room is:

- A 10 m
- B 2 m
- C 6 m

D 4 m

Answer: D

Question 64

$$11^2 + 11^4 \div 11^3 \text{ of } 11 - 11 = ?$$

A 111

B 121

C 131

D 101

Answer: A

Question 65

The speed of the 'Train 18' is 180 km/hr. The distance covered by it in 10 seconds is:

A 100 metres

B 500 metres

C 700 metres

D 648 metres

Answer: B

Question 66

A copper wire is bent in the form of an equilateral triangle of area $4\sqrt{3} \text{ cm}^2$. If the same wire is bent into the form of a square, the area of the square will be:

A 16 sq.cm

B 9 sq. cm

C 144 sq. cm

D 64 sq.cm

Answer: B

Question 67

The total area of a circle and a square is equal to 2611 sq. cm. The diameter of the circle is 42 cm. What is the sum of the circumference of the circle and the perimeter of the square? (Take $\pi = \frac{22}{7}$)

A 280 cm

B 272 cm

- C 380 cm
- D Cannot be determined

Answer: B

Question 68

The amount of profit earned by selling an object for ₹ 524 is equal to the amount of loss suffered by selling it for ₹ 452. What is the cost price of the object?

- A ₹480
- B ₹488
- C ₹485
- D ₹500

Answer: B

Question 69

A circle, with radius 8 cm, which has the area equal to the area of a triangle with base 8 cm. Then the length of the corresponding altitude of triangle is:

- A 38π cm
- B 16π cm
- C 18π cm
- D 8π cm

Answer: B

Question 70

The simple interest for the second year on a certain sum at a certain rate of interest is ₹ 1000. What the sum of the interest accrued on it for the 6th, 7th and 8th years?

- A ₹3200
- B ₹3300
- C ₹3000
- D ₹3630

Answer: C

Question 71

If the ratio between two numbers are 3 : 4. If the first number and second number are increased by 40 % and 50% respectively. Then the new ratio of the numbers are:

- A 9 : 10
- B 11 : 10

C 3 : 4

D 7 : 10

Answer: D

Question 72

The difference between the Mode and the Median of a data is 25. What is the difference between the Median and the Mean?

A 10.5

B 16

C 12.5

D 14

Answer: C

Question 73

Which is the least four-digit number which when divided by 5, 6 and 8 leaves remainder 2 in each case?

A 1032

B 1062

C 1042

D 1082

Answer: D

Question 74

The ratio of spirit and water is 2 : 5. If the volume of solution is increased by 50% by adding spirit only. What is the resultant ratio of spirit and water?

A 9 : 10

B 12 : 15

C 11 : 10

D 3 : 4

Answer: C

Question 75

A trader sold an item at a loss of 20%. Had he sold it for ₹100 more, he would have gained a profit of 5%. What is the cost price of the item?

A ₹ 250

B ₹ 200

C ₹ 25

D ₹ 400

Answer: D

English

Instructions

For the following questions answer them individually

Question 76

Select the most appropriate word to fill in the blank.
Stainless steel pans are usually provided copper bottoms.

A from

B by

C with

D under

Answer: C

Question 77

Select the synonym of the given word.
JUSTICE

A Equality

B Liberty

C Fraternity

D Fairness

Answer: D

Question 78

Identify the segment in the sentence which contains the grammatical error from the given options.
The rearing of silkworms for obtained silk is called sericulture.

A for obtained

B silk is

C called sericulture

D The rearing

Answer: A

Instructions

In the following passage some words have been deleted. Fill in the blanks with the help of the alternatives given.
Select the most appropriate

Passage:

Our stomach contains hydrochloric acid. It (1)..... us to digest food, but too much acid (2)..... the stomach causes indigestion. (3)..... indigestion is painful. To (4)..... indigestion, we take (5)..... antacid such as milk of magnesia.

Question 79

Select the most appropriate option that will fill in the blank number 1.

- A benefits
- B helps
- C cures
- D utilizes

Answer: B

Question 80

Select the most appropriate option that will fill in the blank number 2.

- A at
- B in
- C from
- D of

Answer: B

Question 81

Select the most appropriate option that will fill in the blank number 3.

- A Whenever
- B Finally
- C Always
- D Sometimes

Answer: D

Question 82

Select the most appropriate option that will fill in the blank number 4.

- A soften
- B better
- C correct
- D relieve

Answer: D

Question 83

Select the most appropriate option that will fill in the blank number 5.

- A one
- B a
- C the
- D an

Answer: D

Instructions

For the following questions answer them individually

Question 84

Select the most appropriate word to fill in the blank.
Some regions of our country still remain to the average man.

- A explored
- B accessible
- C inaccessible
- D impossible

Answer: C

Question 85

Select the wrongly spelt word.

- A Possession
- B Particular
- C Permanent
- D Personal

Answer: B

Question 86

Select the word which means the same as the group of words given.
The science of the causes and effects of diseases

- A Pathology
- B Cardiology
- C Physiology

D Zoology

Answer: A

Question 87

Select the synonym of the given word.

LETHARGIC

A Industrious

B Active

C DILIGENT

D Lazy

Answer: D

Question 88

Select the wrongly spelt word.

A Hindrance

B Humorous

C Hypocrisy

D Harrassment

Answer: D

Question 89

Select the meaning of the given idiom.

Cast the first stone

A To be deeply involved

B To be the first to find fault

C To start a fight

D To praise first of all

Answer: B

Question 90

Select the most appropriate option to substitute the underlined segment in the given sentence. If there is no need to substitute it, select No substitution required

A clinical thermometer consists of a long, narrow, uniform glass tube.

A No substitution required

B is containing the

C composed of

D consisted in a

Answer: A

Question 91

Select the meaning of the given idiom.

Mootpoint

A Controversial issue

B Common Belief

C Basic idea

D Improper thought

Answer: A

Question 92

Identify the segment in the sentence which contains the grammatical error from the given options.

In winter, sheeps are kept indoors and fed on leaves, grain and dry fodder.

A sheeps are

B In winter

C kept indoors

D fed on

Answer: A

Question 93

Select the most appropriate word to fill in the blank.

Rumours spread that he soon order the army to open fire.

A would be

B will be

C would have

D would

Answer: D

Question 94

Select the most appropriate option to substitute the underlined segment in the given sentence. If there is no need to substitute it, select No substitution required

The people living in the coastal areas experience a interested phenomenon.

A No substitution required

B the interested phenomenon

C interestingly phenomenon

D an interesting phenomenon

Answer: D

Question 95

Select the antonym of the given word.

ELEGANT

A Unmatched

B Undignified

C Graceful

D Refined

Answer: B

Question 96

Select the word which means the same as the group of words given.

The study of human societies and cultures and their development

A Choreography

B Calligraphy

C Physiotherapy

D Anthropology

Answer: D

Question 97

Select the antonym of the given word.

CURSORY

A Thorough

B Temporary

C Superficial

D Casual

Answer: A

Question 98

Identify the segment in the sentence which contains the grammatical error from the given options.

The larvae, also called caterpillars eat day and night and increase enormousin size.

A enormousin size

B and increase

- C also called
- D eat day and night

Answer: A

Question 99

Select the most appropriate option to substitute the underlined segment in the given sentence. If there is no need to substitute it, select No substitution required.

The eggs are warmed to a suitable temperature for the larvae to hatching from eggs.

- A to hatch from eggs.
- B hatched from eggs.
- C No substitution required
- D hatch from eggs.

Answer: A

Question 100

Select the most appropriate word to fill in the blank.

People like to work for organizations that take interest in their personal and growth.

- A professional
- B physical
- C social
- D financial

Answer: A



Latest Sarkari jobs, Govt Exam alerts, Results and Vacancies

- ▶ Latest News and Notification
- ▶ Exam Paper Analysis
- ▶ Topic-wise weightage
- ▶ Previous Year Papers with Answer Key
- ▶ Preparation Strategy & Subject-wise Books

To know more [Click Here](#)



www.prepp.in