



Practice, Learn and Achieve  
Your Goal with Prepp

# RRB Exam

Assistant Station Manager Paper II

Simplifying  
Government Exams



SSC CHSL



IAS EXAM



RRB NTPC



NTSE



CDS



SSC CGL



CBSE UGC NET



IBPS PO



NDA



SBI PO



IBPS CLERK



AFCAT



SSC JE



CTET



CSIR UGC NET



CAPF



IBPS RRB

[www.prepp.in](http://www.prepp.in)

# Railway Recruitment Board, Bangalore

## TC/CC Junior Accountant/ Clerk, Etc. Examination

Held On : 20 - 08 - 2006

1. A ball tied with a string to a rotating shaft revolves at uniform speed. As the shaft is suddenly brought to rest the string starts getting round the shaft with the angular velocity of the ball.
  - a) increasing
  - b) decreasing
  - c) remaining constant
  - d) becoming zero
2. If an apple is released from an orbiting spaceship, it will-
  - a) fall towards the earth
  - b) move along with spaceship at the same speed
  - c) move at a higher speed
  - d) move at a lower speed
3. What happens when water is cooled from  $8^{\circ}\text{C}$  to  $0^{\circ}\text{C}$ ?
  - a) Its volume decreases uniformly, becoming minimum at  $0^{\circ}\text{C}$
  - b) Its density increases uniformly, attaining maximum value at  $0^{\circ}\text{C}$
  - c) Its volume decreases upto  $4^{\circ}\text{C}$  and then increases
  - d) Its density decreases upto  $4^{\circ}\text{C}$  and then increases
4. During summer, we feel comfortable under a fan because it -
  - a) throws cool air on us
  - b) sets the air in motion, thereby increasing the evaporation of sweat
  - c) produces convection currents
  - d) produces air which carries heat away from the body
5. Light waves are different from sound waves in that-
  - a) light waves are electromagnetic but sound waves are not
  - b) light waves can travel through water but sound waves cannot
  - c) light travels with the same speed in all media
  - d) light waves produce interference but sound waves do not
6. Planets are-
  - a) luminous bodies which twinkle
  - b) non - luminous bodies which twinkle
  - c) luminous bodies which don't twinkle
  - d) non - luminous bodies which don't twinkle








23. Find the oddman out of the following sites of Harappa civilization?  
a) Kalibanga      b) Mohanjodaro      c) Lothal      d) Surkotada
24. In the world congress of religions in Chicago in 1893 who represented India?  
a) Dadabhai Naoroji      b) Swami Dayanand  
c) Swami Vivekananda      d) Ramkrishna Paramhans
25. Babar was cremated in ..... as he desired.  
a) Kabul      b) Peshawar      c) Delhi      d) Agra
26. The SWADESHI movement in India was started during -  
a) Champaran Satyagraha of Gandhi  
b) Movement against partition of Bengal  
c) Movement against Rowlat Act  
d) First non - cooperation movement in 1919 - 22
27. Fill in the blank with appropriate adjective.  
Do you have ..... tea in the pot?  
a) any      b) some      c) few      d) none
28. What are potato ores?  
a) Nodules on the sea bed containing a variety of minerals  
b) Seed potato grown in Himachal Pradesh  
c) Iron ore having a large concentration of Sulphur  
d) Ores of nuclear minerals
29. What is Obra known for?  
a) A new refinery      b) Thermal power station  
c) An upcoming aluminium plant      d) Bird sanctuary
30. Where are diesel locomotives manufactured?  
a) Chittaranjan      b) Varansi      c) Bhopal      d) Jamshedpur
31. On which river is the Nagarjunasagar project located?  
a) Krishna      b) Godavari      c) Kaveri      d) Tapti
32. What is Operation Flood concerned with?  
a) Flood Control  
b) The provision of irrigation facilities  
c) The creation of buffer stocks of food grains  
d) Improving the availability of milk in the cities

33. In which area is the deodar tree commonly found?  
a) Tropical evergreen forests                      b) Tropical deciduous forests  
c) Thron forests                                      d) Alpine forests
34. KP Canal joins–  
a) Andhra Pradesh and Karnataka                      b) Andhra Pradesh and Tamil Nadu  
c) Karnataka and Tamil Nadu                      d) Andhra Pradesh and Orissa
35. The Niger River falls in–  
a) Arctic Ocean                                      b) Bay of Mexico  
c) Gulf of Guinea                                      d) Pacific Ocean
36. The Annapurna mountain peak is situated in–  
a) India                      b) Nepal                      c) China                      d) Pakistan
37. Victoria island is situated in .....  
a) Arctic Ocean                                      b) Indian Ocean  
c) North Atlantic Ocean                      d) Pacific Ocean
38. Dr. S. Radha Krishnan was .....  
a) First President of India                      b) First Education Minister  
c) First Speaker of Indian Parliament                      d) First Vice - President of India
39. Apsara is a–  
a) Nuclear reactor                                      b) Nuclear submarine  
c) Tank carrier submarine                      d) Mountain peak
40. The first Indian pilotless rocket is–  
a) Luna - 9                      b) Apollo                      c) Luna - 10                      d) Lakshya
41. The famous Vishwanath temple is situated in .....  
a) Puri                      b) Pachmarhi                      c) Varanasi                      d) Ellora
42. Gomateshwar statue is situated in–  
a) Subramanyam road                                      b) Shravanabelagola  
c) Ellora                                      d) Kolkata
43. Who is known as Gandhi of Bihar?  
a) Dr. Rajendra Prasad                                      b) M.K. Gandhi  
c) Khan Abdul Gaffar Khan                                      d) Lal Bahadur Shastri

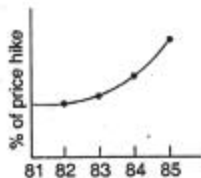
44. The International Labour Organisation is headquartered at—  
a) Geneva                      b) New York                      c) Rome                      d) Paris
45. Yakshagan is the folk dance of—  
a) Tamil Nadu                      b) Kerala                      c) Karnataka                      d) Andhra Pradesh
46. McMohan Line is an international border line between—  
a) Pakistan and Afghanistan                      b) India and China  
c) India and Pakistan                      d) India and Nepal
47. Vaccination is invented by—  
a) Edward Jennar                      b) Leuis Pastuer  
c) Wating                      d) None of these
48. Basketball team has ..... number of players.  
a) 5                      b) 6                      c) 7                      d) 8
49. The strength of the legislative council of a state cannot exceed ..... of the membership of the legislative assembly.  
a) one - half                      b) one - third                      c) one - fourth                      d) one - fifth
50. The Chief Justice and other judges of the High Court retire at the age of—  
a) 60 years                      b) 62 years                      c) 65 years                      d) 70 years
51. Which of the following statements correctly describes a hung parliament?  
a) A parliament in which no party has a clear majority  
b) The Prime Minister has resigned but the parliament is not dissolved  
c) The parliament lacks the quorum to conduct business  
d) None of these
52. The final authority to make a proclamation of emergency rests with—  
a) the Parliament                      b) the President  
c) council of Ministers                      d) the Prime Minister
53. The given figure is a symbol of



- a) FBI                      b) Radio  
c) Olympics                      d) CBI



54. The following graph shows—



- a) Low growth
- b) Constant growth
- c) First moderate then more growth
- d) Fall in price

55. A man is walking in a rectangular field whose perimeter is 6 km. If the area of rectangular field be 2 sq km, then what is the difference between the length and breadth of the rectangle?

- a)  $\frac{1}{2}$  km
- b) 1 km
- c)  $1\frac{1}{2}$  km
- d) 2 km

56. If a watch runs 5 minutes fast every hour, then the angle traversed by a second hand in one minute is—

- a)  $360^\circ$
- b)  $360.5^\circ$
- c)  $390^\circ$
- d)  $380^\circ$

*Directions (Q. 57 and 58): Find the oddman out.*

- 57. a) Mahanadi      b) Cauvery      c) Narmada      d) Krishna
- 58. a) Yuri Gagarin      b) Rakesh Sharma      c) Neil Armstrong      d) Edmund Hillary
- 59. 563, 647, 479, 815, (.....)  
a) 672      b) 386      c) 279      d) 143
- 60. 2, 6, 12, 20, 30, 42, 56, (.....)  
a) 60      b) 64      c) 70      d) 72
- 61. If FRIEND is coded as HUMJTK, how is CANDLE written in that code.  
a) EDRJRL      b) DCQHJK      c) ESJFME      d) FYOBOC
- 62. In a certain code INSTITUTION is written as NOITUTITSNI. How is PERFECTION written in that code?  
a) NOICTEFREP      b) NOITCEFERP  
c) NOITCEFRPE      d) NOITCEFREP
- 63. If water is called blue, blue is called red, red is called white, white is called sky, sky is called rain, rain is called green and green is called air, which of the following is the colour of milk?  
a) Air      b) Green      c) White      d) Sky



64. A man said to a lady, "Your mother's husband's sister is my aunt." How is the lady related to the man?
- a) Daughter      b) Mother      c) Sister      d) Aunt

**Directions (Q. 65 to 67):** Read the following information and answer the questions given below it. Six students A, B, C, D, E and F are sitting in the field. A and B are from Nehru House while the rest belong to Gandhi House. D and F are tall while the others are short A, C and D are wearing glasses while the others are not.

65. Which two students who are not wearing glasses are short?
- a) A and F      b) C and E      c) B and F      d) E and F
66. Which short student of Gandhi House is not wearing glasses?
- a) F      b) E      c) B      d) A
67. Which tall student of Gandhi House is not wearing glasses?
- a) B      b) C      c) F      d) E

**Directions (Q. 68 to 72):** Read the following information carefully and answer the questions.

- (i) P, Q, R, S, T and U are the six members of a family in which there are two married couples.
- (ii) Teacher T, is married to a doctor who is mother of R and U.
- (iii) Lawyer Q is married to P.
- (iv) P has a son and a grandson.
- (v) Out of the two married women one is a house wife.
- (vi) There are one student and a male engineer in the family.
68. How is P related to R?
- a) Maternal father      b) Mother  
c) Sister      d) Grand mother
69. Who is the house wife?
- a) P      b) Q      c) S      d) None of these
70. How is R related to U?
- a) Brother      b) Sister  
c) Brother or sister      d) Information inadequate
71. Which of the following groups denote the female group?

- a) PSR  
 c) QTR
- b) PSU  
 d) Information inadequate

72. Which of the following is correct with respect to grand daughter in the family?

- a) He is a lawyer  
 c) He is an engineer
- b) She is a student  
 d) Information inadequate

73. Which one of the following Venn - diagrams best illustrates the three classes : Rhombus, Quadrilaterals, Polygons?



74. How many even numbers are there in the following sequence of numbers which are immediately followed by an odd number as well as immediately preceded by an even number?

8 6 7 6 8 9 3 2 7 5 3 4 2 2 3 5 5 2 2 8 11 9

- a) Three  
 b) Five  
 c) Six  
 d) None of these

75. In a row of girls, Shilpa is eighth from the left and Reena is seventeenth from the right. If they interchange their positions, Shilpa becomes fourteenth from the left. How many girls are there in the row?

- a) 25  
 b) 27  
 c) 29  
 d) None of these

76. Kailash remembers that his brother Deepak's birthday falls after 20<sup>th</sup> May but before 28<sup>th</sup> May, while Geeta remembers that Deepak's birthday falls before 22<sup>nd</sup> May and after 12<sup>th</sup> May. On what date Deepak's birthday falls?

- a) 20<sup>th</sup> May  
 c) 22<sup>nd</sup> May
- b) 21<sup>st</sup> May  
 d) Cannot be determined

77. If  $\times$  means  $+$ ,  $-$  means  $\times$ ,  $\div$  means  $+$ , and  $+$  means  $-$ , then

$$(3 - 15 \div 19) \times 8 + 6 = ?$$

- a) 8  
 b) 4  
 c) 2  
 d) -1

78. Arrange the following in a meaningful order:

Doctor, Fever, Medicine, Medical shop

- a) Medicine, Doctor, Medical shop, Fever  
 b) Doctor, Medical shop, Medicine, Fever

- c) Fever, Doctor, Medicinal Shop, Medicine  
 d) Medical Shop, Medicine, Fever, Doctor

79. Out of the questions solved by a student the number of incorrect solutions was twice the correct answers. He solved 48 questions. How many answers were correctly solved?  
 a) 12                      b) 16                      c) 24                      d) 18
80. People and horses in the same number were going some where. Half of the owners were riding their horses and the remaining were walking on foot with the horses. If the total number of feet of walkers was 70. How many were the horses?  
 a) 10                      b) 12                      c) 14                      d) 16

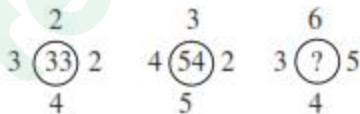
**Directions (Q. 81 to 83): Study the arrangement and select the missing number.**

81.

28	60	48
5	6	7
14	39	27
7	?	16

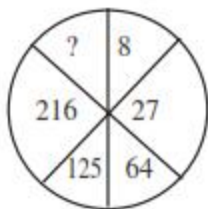
- a) 18  
 b) 23  
 c) 24  
 d) 27

82. Find the missing number



- a) 78                      b) 82                      c) 94                      d) 86

83. Find the missing number?



- a) 4                      b) 305                      c) 343                      d) 729

84. The appropriate meaning of IMPAIR is

- a) separate                      b) make amends  
 c) make worse                      d) falsify

85. The appropriate meaning of SUBLIME is

- a) unconscious                      b) respected                      c) exalted                      d) sneaky





97. a) Pneumonia      b) Neumonia      c) Pnuemonia      d) Pnemonia

*Directions (Q. 98 and 99): Fill in the blanks with appropriate article.*

98. God made country ..... man made town.

a) an                      b) a                      c) the                      d) no article

99. Do you intend to travel by the water or by ..... land?

a) an                      b) a                      c) the                      d) no article

*Directions (Q. 100): Find the mistake in the appropriate part of given sentence. In case there is no mistake, choose option (d).*

100. The master of a ship (a)/ are still seen (b)/ in the place where it sank. (c)/ No error (d)

### ANSWERS

1-a; 2-b; 3-c; 4-b; 5-a; 6-d; 7-c; 8-c; 9-b; 10-c; 11-b; 12-b; 13-b; 14-c; 15-a; 16-c; 17-b; 18-b; 19-b; 20-b; 21-c; 22-d; 23-b; 24-c; 25-a; 26-b; 27-b; 28-a; 29-b; 30-b; 31-a; 32-d; 33-a; 34-b; 35-c; 36-b; 37-a; 38-d; 39-a; 40-d; 41-c; 42-b; 43-a; 44-a; 45-c; 46-b; 47-b; 48-a; 49-b; 50-b; 51-a; 52-b; 53-c; 54-c; 55-b; 56-b; 57-c; 58-d; 59-d; 60-d; 61-a; 62-d; 63-d; 64-c; 65-c; 66-b; 67-c; 68-a; 69-b; 70-c; 71-d; 72-d; 73-a; 74-a; 75-d; 76-b; 77-c; 78-c; 79-b; 80-c; 81-b; 82-d; 83-c; 84-c; 85-c; 86-d; 87-a; 88-a; 89-c; 90-d; 91-c; 92-a; 93-d; 94-d; 95-b; 96-b; 97-a; 98-d; 99-c; 100-b.



# Latest Sarkari jobs, Govt Exam alerts, Results and Vacancies

- ▶ Latest News and Notification
- ▶ Exam Paper Analysis
- ▶ Topic-wise weightage
- ▶ Previous Year Papers with Answer Key
- ▶ Preparation Strategy & Subject-wise Books

To know more [Click Here](#)



[www.prepp.in](http://www.prepp.in)