



Practice, Learn and Achieve  
Your Goal with Prepp

# ESIC Exam

Previous Paper

Simplifying  
Government Exams



SSC CHSL



IAS EXAM



RRB NTPC



NTSE



CDS



SSC CGL



CBSE UGC NET



IBPS PO



NDA



SBI PO



IBPS CLERK



AFCAT



SSC JE



CTET



CSIR UGC NET



CAPF



IBPS RRB

[www.prepp.in](http://www.prepp.in)

# Question Paper Preview

## Notations :

- Options shown in green color and with ✓ icon are correct.
- Options shown in red color and with ✗ icon are incorrect.

<b>Question Paper Name:</b>	Upper Division Clerks Shift 4
<b>Subject Name:</b>	UPPER DIVISION CLERK UDC
<b>Creation Date:</b>	2016-03-19 14:57:37
<b>Duration:</b>	120
<b>Total Marks:</b>	200
<b>Display Marks:</b>	Yes

## Upper Division Clerks Shift 1

Group Number :	1
Group Id :	73681527
Group Maximum Duration :	0
Group Minimum Duration :	120
Revisit allowed for view? :	No
Revisit allowed for edit? :	No
Break time:	0
Mandatory Break time:	No
Group Marks:	200

## Numerical Ability

Section Id :	736815103
Section Number :	1
Section type :	Online
Mandatory or Optional:	Mandatory
Number of Questions:	50
Number of Questions to be attempted:	50
Section Marks:	50
Display Number Panel:	Yes
Group All Questions:	No

Sub-Section Number:	1
Sub-Section Id:	736815155
Question Shuffling Allowed :	Yes

**Question Number : 1 Question Id : 7368155253 Question Type : MCQ Option Shuffling : Yes Display Question Number : Yes**  
**Single Line Question Option : No Option Orientation : Vertical**

**Correct : 1 Wrong : 0.25**

Convert 30 into a binary number.

## Options :

- ✓ 11110

2. ✘ 101010
3. ✘ 100110
4. ✘ 110011

Question Number : 1 Question Id : 7368155253 Question Type : MCQ Option Shuffling : Yes Display Question Number : Yes  
Single Line Question Option : No Option Orientation : Vertical

Correct : 1 Wrong : 0.25

30 को बाइनरी संख्या में परिवर्तित करें।

Options :

1. ✔ 11110
2. ✘ 101010
3. ✘ 100110
4. ✘ 110011

Question Number : 2 Question Id : 7368155254 Question Type : MCQ Option Shuffling : Yes Display Question Number : Yes  
Single Line Question Option : No Option Orientation : Vertical

Correct : 1 Wrong : 0.25

The number of prime factors in  $(15)^{24} \times (4)^{16} \times (6)^{15}$  is :

Options :

1. ✘ 116
2. ✔ 110
3. ✘ 112
4. ✘ 115

Question Number : 2 Question Id : 7368155254 Question Type : MCQ Option Shuffling : Yes Display Question Number : Yes  
Single Line Question Option : No Option Orientation : Vertical

Correct : 1 Wrong : 0.25

$(15)^{24} \times (4)^{16} \times (6)^{15}$  में अभाज्य गुणांकों की संख्या है:

Options :

1. ✘ 116
2. ✔ 110
3. ✘ 112
4. ✘ 115

Question Number : 3 Question Id : 7368155255 Question Type : MCQ Option Shuffling : Yes Display Question Number : Yes  
Single Line Question Option : No Option Orientation : Vertical

Correct : 1 Wrong : 0.25

What least value must be assigned to \* so that the number 5048\*35 is divisible by 9?

Options :

1. ✘ 5
2. ✔ 2
3. ✘ 3

4. ✘ 4

Question Number : 3 Question Id : 7368155255 Question Type : MCQ Option Shuffling : Yes Display Question Number : Yes  
Single Line Question Option : No Option Orientation : Vertical

Correct : 1 Wrong : 0.25

\* को कौन सा न्यूनतम मान दिया जाना चाहिए, ताकि संख्या  $5048 \times 35$ , 9 से विभाज्य हो?

Options :

1. ✘ 5

2. ✔ 2

3. ✘ 3

4. ✘ 4

Question Number : 4 Question Id : 7368155256 Question Type : MCQ Option Shuffling : Yes Display Question Number : Yes  
Single Line Question Option : No Option Orientation : Vertical

Correct : 1 Wrong : 0.25

Compute:  $1203 \times 999 + 1203$ .

Options :

1. ✘ 1023999

2. ✘ 1023000

3. ✔ 1203000

4. ✘ 1203999

Question Number : 4 Question Id : 7368155256 Question Type : MCQ Option Shuffling : Yes Display Question Number : Yes  
Single Line Question Option : No Option Orientation : Vertical

Correct : 1 Wrong : 0.25

गणना करें:  $1203 \times 999 + 1203$

Options :

1. ✘ 1023999

2. ✘ 1023000

3. ✔ 1203000

4. ✘ 1203999

Question Number : 5 Question Id : 7368155257 Question Type : MCQ Option Shuffling : Yes Display Question Number : Yes  
Single Line Question Option : No Option Orientation : Vertical

Correct : 1 Wrong : 0.25

Find the units digit in  $(245)^{2013} + (141)^{2013}$

Options :

1. ✘ 3

2. ✘ 4

3. ✘ 9

4. ✔ 6

Question Number : 5 Question Id : 7368155257 Question Type : MCQ Option Shuffling : Yes Display Question Number : Yes  
Single Line Question Option : No Option Orientation : Vertical

Correct : 1 Wrong : 0.25

$(245)^{2013} + (141)^{2013}$  में इकाइयों के अंक खोजें।

Options :

1. ✘ 3
2. ✘ 4
3. ✘ 9
4. ✔ 6

Question Number : 6 Question Id : 7368155258 Question Type : MCQ Option Shuffling : Yes Display Question Number : Yes  
Single Line Question Option : No Option Orientation : Vertical

Correct : 1 Wrong : 0.25

Compute:  $213 \times 625 + 625$ .

Options :

1. ✘ 152634
2. ✘ 134560
3. ✘ 134750
4. ✔ 133750

Question Number : 6 Question Id : 7368155258 Question Type : MCQ Option Shuffling : Yes Display Question Number : Yes  
Single Line Question Option : No Option Orientation : Vertical

Correct : 1 Wrong : 0.25

गणना करें:  $213 \times 625 + 625$

Options :

1. ✘ 152634
2. ✘ 134560
3. ✘ 134750
4. ✔ 133750

Question Number : 7 Question Id : 7368155259 Question Type : MCQ Option Shuffling : Yes Display Question Number : Yes  
Single Line Question Option : No Option Orientation : Vertical

Correct : 1 Wrong : 0.25

Kiran studies for  $8\frac{1}{4}$  hours daily. He devotes  $3\frac{1}{2}$  hours of his time for Science. How much time does he devote for other subjects?

Options :

1. ✘  $3\frac{1}{5} hrs$
2. ✔  $4\frac{3}{4} hrs$
3. ✘  $3\frac{1}{3} hrs$

4. ✘  $3\frac{1}{4} hrs$

Question Number : 7 Question Id : 7368155259 Question Type : MCQ Option Shuffling : Yes Display Question Number : Yes  
Single Line Question Option : No Option Orientation : Vertical

Correct : 1 Wrong : 0.25

किरण प्रतिदिन  $8\frac{1}{4}$  घंटे अध्ययन करती है। वह अपने समय के  $3\frac{1}{2}$  घंटे विज्ञान को देती है। वह अन्य विषयों को कितना समय देती है?

Options :

1. ✘  $3\frac{1}{5}$  घंटे

2. ✔  $4\frac{3}{4}$  घंटे

3. ✘  $3\frac{1}{3}$  घंटे

4. ✘  $3\frac{1}{4}$  घंटे

Question Number : 8 Question Id : 7368155260 Question Type : MCQ Option Shuffling : Yes Display Question Number : Yes  
Single Line Question Option : No Option Orientation : Vertical

Correct : 1 Wrong : 0.25

Ram and Tilak together bought a water bottle that contained  $2\frac{1}{2}$  liters of water. Ram consumed  $\frac{1}{3}$  of the water. Remaining water was consumed by Tilak. Find the amount of water consumed by Tilak in liters?

Options :

1. ✘ 1.5L

2. ✔ 1.66L

3. ✘ 1.6L

4. ✘ 1.45L

Question Number : 8 Question Id : 7368155260 Question Type : MCQ Option Shuffling : Yes Display Question Number : Yes  
Single Line Question Option : No Option Orientation : Vertical

Correct : 1 Wrong : 0.25

राम और तिलक ने एक साथ पानी की बोतल खरीदी जिसमें  $2\frac{1}{2}$  लीटर पानी था। राम ने  $\frac{1}{3}$  हिस्सा पानी पिया। बाकी का पानी तिलक ने पिया। तिलक ने कितना लीटर पानी पिया?

Options :

1. ✘ 1.5 लीटर

2. ✔ 1.66 लीटर

3. ✘ 1.6 लीटर

4. ✘ 1.45 लीटर

Question Number : 9 Question Id : 7368155261 Question Type : MCQ Option Shuffling : Yes Display Question Number : Yes  
Single Line Question Option : No Option Orientation : Vertical

Correct : 1 Wrong : 0.25

Arjun, Bala, Chandra and Dinesh finished coloring a picture in  $\frac{3}{5}$  hour,  $\frac{2}{3}$  hour,  $\frac{1}{4}$  hour and  $\frac{2}{5}$  hour respectively. Who among the following finished their coloring last?

Options :

1. ✘ Dinesh
2. ✘ Chandra
3. ✔ Bala
4. ✘ Arjun

Question Number : 9 Question Id : 7368155261 Question Type : MCQ Option Shuffling : Yes Display Question Number : Yes  
Single Line Question Option : No Option Orientation : Vertical

Correct : 1 Wrong : 0.25

अर्जुन, बाला, चंद्रा और दिनेश ने क्रमशः  $\frac{3}{5}$  घंटे,  $\frac{2}{3}$  घंटे,  $\frac{1}{4}$  घंटे और  $\frac{2}{5}$  घंटे में तस्वीर में रंग भरने के कार्य को समाप्त किया। निम्नलिखित में से किसने आखिर में रंग भरना समाप्त किया?

Options :

1. ✘ दिनेश
2. ✘ चंद्रा
3. ✔ बाला
4. ✘ अर्जुन

Question Number : 10 Question Id : 7368155262 Question Type : MCQ Option Shuffling : Yes Display Question Number : Yes  
Single Line Question Option : No Option Orientation : Vertical

Correct : 1 Wrong : 0.25

Which among the following is the largest?

$\frac{9}{2}$ ,  $\frac{17}{4}$ ,  $\frac{3}{2}$ ,  $\frac{7}{3}$

Options :

1. ✘  $\frac{17}{4}$
2. ✘  $\frac{3}{2}$
3. ✘  $\frac{7}{3}$
4. ✔  $\frac{9}{2}$

Question Number : 10 Question Id : 7368155262 Question Type : MCQ Option Shuffling : Yes Display Question Number : Yes  
Single Line Question Option : No Option Orientation : Vertical

Correct : 1 Wrong : 0.25

निम्नलिखित में से कौन सी संख्या सबसे बड़ी है?

$$\frac{9}{2}, \frac{17}{4}, \frac{3}{2}, \frac{7}{3}$$

Options :

1. ✘  $\frac{17}{4}$
2. ✘  $\frac{3}{2}$
3. ✘  $\frac{7}{3}$
4. ✔  $\frac{9}{2}$

Question Number : 11 Question Id : 7368155263 Question Type : MCQ Option Shuffling : Yes Display Question Number : Yes  
Single Line Question Option : No Option Orientation : Vertical

Correct : 1 Wrong : 0.25

The difference of two numbers is 18 and one-fourth of their sum is 21. Find the largest number.

Options :

1. ✔ 51
2. ✘ 45
3. ✘ 28
4. ✘ 15

Question Number : 11 Question Id : 7368155263 Question Type : MCQ Option Shuffling : Yes Display Question Number : Yes  
Single Line Question Option : No Option Orientation : Vertical

Correct : 1 Wrong : 0.25

दो अंकों का अंतर 18 है और उनके योग का एक-चौथाई हिस्सा 21 है। सबसे बड़ी संख्या का पता लगाएं।

Options :

1. ✔ 51
2. ✘ 45
3. ✘ 28
4. ✘ 15

Question Number : 12 Question Id : 7368155264 Question Type : MCQ Option Shuffling : Yes Display Question Number : Yes  
Single Line Question Option : No Option Orientation : Vertical

Correct : 1 Wrong : 0.25

The difference between a number and its two-third is 40. What is the number?

Options :

1. ✔ 120
2. ✘ 165
3. ✘ 619



4. ✘ 390

Question Number : 12 Question Id : 7368155264 Question Type : MCQ Option Shuffling : Yes Display Question Number : Yes  
Single Line Question Option : No Option Orientation : Vertical

Correct : 1 Wrong : 0.25

एक संख्या और उसके  $2/3$  के बीच का अंतर 40 है। संख्या क्या है?

Options :

1. ✔ 120

2. ✘ 165

3. ✘ 619

4. ✘ 390

Question Number : 13 Question Id : 7368155265 Question Type : MCQ Option Shuffling : Yes Display Question Number : Yes  
Single Line Question Option : No Option Orientation : Vertical

Correct : 1 Wrong : 0.25

Find the value of  $(-2)^6 \times (2)^{-6} \times (2)^5$

Options :

1. ✘ 55

2. ✔ 32

3. ✘ -27

4. ✘ -108

Question Number : 13 Question Id : 7368155265 Question Type : MCQ Option Shuffling : Yes Display Question Number : Yes  
Single Line Question Option : No Option Orientation : Vertical

Correct : 1 Wrong : 0.25

$(-2)^6 \times (2)^{-6} \times (2)^5$  के मान का पता लगाएं।

Options :

1. ✘ 55

2. ✔ 32

3. ✘ -27

4. ✘ -108

Question Number : 14 Question Id : 7368155266 Question Type : MCQ Option Shuffling : Yes Display Question Number : Yes  
Single Line Question Option : No Option Orientation : Vertical

Correct : 1 Wrong : 0.25

If  $94X3 - 5Y28 = 4115$ , then which of the following should come in place of X?

Options :

1. ✔ 10

2. ✘ 6

3. ✘ 3

4. ✘ 5

Note: For this question, discrepancy is found in question/answer. Full Marks is being awarded to all candidates.

Question Number : 14 Question Id : 7368155266 Question Type : MCQ Option Shuffling : Yes Display Question Number : Yes  
Single Line Question Option : No Option Orientation : Vertical

Correct : 1 Wrong : 0.25

अगर  $94X3 - 5Y28 = 4115$  है, तो निम्न में से X के स्थान पर क्या आना चाहिए?

Options :

1. ✓ 10
2. ✗ 6
3. ✗ 3
4. ✗ 5

Note: For this question, discrepancy is found in question/answer. Full Marks is being awarded to all candidates.

Question Number : 15 Question Id : 7368155267 Question Type : MCQ Option Shuffling : Yes Display Question Number : Yes  
Single Line Question Option : No Option Orientation : Vertical

Correct : 1 Wrong : 0.25

Solve :  $\frac{(513+305)^2 + (513-305)^2}{513 \times 513 + 305 \times 305}$

Options :

1. ✗ 9
2. ✗ 4
3. ✗ 3
4. ✓ 2

Question Number : 15 Question Id : 7368155267 Question Type : MCQ Option Shuffling : Yes Display Question Number : Yes  
Single Line Question Option : No Option Orientation : Vertical

Correct : 1 Wrong : 0.25

हल करें:  $\frac{(513+305)^2 + (513-305)^2}{513 \times 513 + 305 \times 305}$

Options :

1. ✗ 9
2. ✗ 4
3. ✗ 3
4. ✓ 2

Question Number : 16 Question Id : 7368155268 Question Type : MCQ Option Shuffling : Yes Display Question Number : Yes  
Single Line Question Option : No Option Orientation : Vertical

Correct : 1 Wrong : 0.25

The present salary of Tarun is Rs.6500. This will be increased by 6% in the next year.  
What will be the increased salary of Tarun?

Options :

1. ✗ Rs.7250
2. ✗ Rs.7100
3. ✓ Rs.6890
4. ✗ Rs.7200

Question Number : 16 Question Id : 7368155268 Question Type : MCQ Option Shuffling : Yes Display Question Number : Yes  
Single Line Question Option : No Option Orientation : Vertical

Correct : 1 Wrong : 0.25

तरुण का वर्तमान वेतन रु. 6500 है। अगले वर्ष उसके वेतन में 6% की वृद्धि होगी।  
वृद्धि के बाद तरुण का बढ़ा हुआ वेतन कितना होगा?

Options :

1. ✘ रु. 7250
2. ✘ रु. 7100
3. ✔ रु. 6890
4. ✘ रु. 7200

Question Number : 17 Question Id : 7368155269 Question Type : MCQ Option Shuffling : Yes Display Question Number : Yes  
Single Line Question Option : No Option Orientation : Vertical

Correct : 1 Wrong : 0.25

In an examination, 97% of the candidates passed and 300 failed. How many candidates  
appeared for the examination?

Options :

1. ✘ 13500
2. ✘ 14000
3. ✔ 10000
4. ✘ 12500

Question Number : 17 Question Id : 7368155269 Question Type : MCQ Option Shuffling : Yes Display Question Number : Yes  
Single Line Question Option : No Option Orientation : Vertical

Correct : 1 Wrong : 0.25

एक परीक्षा में, 97% परीक्षार्थी उत्तीर्ण और 300 अनुत्तीर्ण हुए। परीक्षा में कितने  
परीक्षार्थी उपस्थित थे?

Options :

1. ✘ 13500
2. ✘ 14000
3. ✔ 10000
4. ✘ 12500

Question Number : 18 Question Id : 7368155270 Question Type : MCQ Option Shuffling : Yes Display Question Number : Yes  
Single Line Question Option : No Option Orientation : Vertical

Correct : 1 Wrong : 0.25

What percent of  $2\frac{3}{4}$  days is 120 minutes?

Options :

1. ✔ 3.03%
2. ✘ 5.5%
3. ✘ 0.55%
4. ✘ 2.5%

Question Number : 18 Question Id : 7368155270 Question Type : MCQ Option Shuffling : Yes Display Question Number : Yes  
Single Line Question Option : No Option Orientation : Vertical

Correct : 1 Wrong : 0.25

120 मिनट,  $2\frac{3}{4}$  दिन का कितना प्रतिशत होता है?

Options :

1. ✓ 3.03%
2. ✗ 5.5%
3. ✗ 0.55%
4. ✗ 2.5%

Question Number : 19 Question Id : 7368155271 Question Type : MCQ Option Shuffling : Yes Display Question Number : Yes  
Single Line Question Option : No Option Orientation : Vertical

Correct : 1 Wrong : 0.25

Express 60 paise : 3 rupees in its simplest form.

Options :

1. ✗ 1:8
2. ✓ 1:5
3. ✗ 4:5
4. ✗ 5:4

Question Number : 19 Question Id : 7368155271 Question Type : MCQ Option Shuffling : Yes Display Question Number : Yes  
Single Line Question Option : No Option Orientation : Vertical

Correct : 1 Wrong : 0.25

60 पैसे : 3 रुपये को इसके सरलतम रूप में दर्शाएँ।

Options :

1. ✗ 1:8
2. ✓ 1:5
3. ✗ 4:5
4. ✗ 5:4

Question Number : 20 Question Id : 7368155272 Question Type : MCQ Option Shuffling : Yes Display Question Number : Yes  
Single Line Question Option : No Option Orientation : Vertical

Correct : 1 Wrong : 0.25

Two numbers are in ratio 11:9. If 5 is subtracted from each, the ratio becomes 5:4. Find the smallest number.

Options :

1. ✗ 26
2. ✗ 30
3. ✗ 24
4. ✓ 45

Question Number : 20 Question  
Single Line Question Option : N

Latest Sarkari Jobs, Govt Exam Results,  
Vacancies and updates on one click

Know More

lay Question Number : Yes

Correct : 1 Wrong : 0.25

दो अंक 11:9 के अनुपात में हैं। यदि प्रत्येक से 5 घटाया जाता है, तो अनुपात 5:4 हो जाता है। सबसे छोटी संख्या का पता लगाएं।

Options :

1. ✘ 26
2. ✘ 30
3. ✘ 24
4. ✔ 45

Question Number : 21 Question Id : 7368155273 Question Type : MCQ Option Shuffling : Yes Display Question Number : Yes Single Line Question Option : No Option Orientation : Vertical

Correct : 1 Wrong : 0.25

A bag contains 50 paise, 25 paise and 10 paise coins in the ratio 6:5:3 amounting to Rs.273/-. Find the total number of coins in the bag.

Options :

1. ✘ 163
2. ✘ 175
3. ✘ 150
4. ✔ 840

Question Number : 21 Question Id : 7368155273 Question Type : MCQ Option Shuffling : Yes Display Question Number : Yes Single Line Question Option : No Option Orientation : Vertical

Correct : 1 Wrong : 0.25

एक थैले में 50 पैसे, 25 पैसे और 10 पैसे के सिक्के 6:5:3 के अनुपात में हैं जिनका कुल अनुपात रु. 273/- है। थैले में कुल सिक्कों की संख्या कितनी है।

Options :

1. ✘ 163
2. ✘ 175
3. ✘ 150
4. ✔ 840

Question Number : 22 Question Id : 7368155274 Question Type : MCQ Option Shuffling : Yes Display Question Number : Yes Single Line Question Option : No Option Orientation : Vertical

Correct : 1 Wrong : 0.25

Find the average of 120,524,326,241,414.

Options :

1. ✔ 325
2. ✘ 225
3. ✘ 120
4. ✘ 244

Question Number : 22 Question Id : 7368155274 Question Type : MCQ Option Shuffling : Yes Display Question Number : Yes  
Single Line Question Option : No Option Orientation : Vertical

Correct : 1 Wrong : 0.25

120, 524, 326, 241, 414 का औसत ज्ञात करें।

Options :

1. ✓ 325
2. ✗ 225
3. ✗ 120
4. ✗ 244

Question Number : 23 Question Id : 7368155275 Question Type : MCQ Option Shuffling : Yes Display Question Number : Yes  
Single Line Question Option : No Option Orientation : Vertical

Correct : 1 Wrong : 0.25

The average of 7 quantities is 9. The average of five of them is 9. What is the average of remaining quantities?

Options :

1. ✗ 19
2. ✗ 15
3. ✓ 9
4. ✗ 30

Question Number : 23 Question Id : 7368155275 Question Type : MCQ Option Shuffling : Yes Display Question Number : Yes  
Single Line Question Option : No Option Orientation : Vertical

Correct : 1 Wrong : 0.25

7 वस्तुओं की औसत मात्रा 9 है। उनमें से पांच की औसत मात्रा 9 है। शेष मात्रा का औसत कितना है?

Options :

1. ✗ 19
2. ✗ 15
3. ✓ 9
4. ✗ 30

Question Number : 24 Question Id : 7368155276 Question Type : MCQ Option Shuffling : Yes Display Question Number : Yes  
Single Line Question Option : No Option Orientation : Vertical

Correct : 1 Wrong : 0.25

The average monthly income of P and Q is Rs.13000. The average monthly income of Q and R is Rs.10000 and the average monthly income of P and R is Rs.12000. The monthly income of P is?

Options :

1. ✓ Rs.4500
2. ✗ Rs.3500
3. ✗ Rs.5500
4. ✗ Rs.7500

Note: For this question, discrepancy is found in question/answer. Full Marks is being awarded to all candidates.

Question Number : 24 Question Id : 7368155276 Question Type : MCQ Option Shuffling : Yes Display Question Number : Yes  
Single Line Question Option : No Option Orientation : Vertical

Correct : 1 Wrong : 0.25

P और Q की औसत मासिक आय रु.13000 है। Q और R की औसत मासिक आय रु.10000 और P और R की औसत मासिक आय रु.12000 है। P की मासिक आय कितनी है?

Options :

1. ✓ रु. 4500
2. ✗ रु. 3500
3. ✗ रु. 5500
4. ✗ रु. 7500

Note: For this question, discrepancy is found in question/answer. Full Marks is being awarded to all candidates.

Question Number : 25 Question Id : 7368155277 Question Type : MCQ Option Shuffling : Yes Display Question Number : Yes  
Single Line Question Option : No Option Orientation : Vertical

Correct : 1 Wrong : 0.25

Find the amount at simple interest on Rs.3550 for 3 years 6 months at 5% per annum.

Options :

1. ✗ Rs.3500.25
2. ✓ Rs.4171.25
3. ✗ Rs.3800.25
4. ✗ Rs.3900.25

Question Number : 25 Question Id : 7368155277 Question Type : MCQ Option Shuffling : Yes Display Question Number : Yes  
Single Line Question Option : No Option Orientation : Vertical

Correct : 1 Wrong : 0.25

3 साल 6 महीने के लिए प्रति वर्ष 5% की दर से रु. 3550 पर साधारण ब्याज की दर से राशि पता करें।

Options :

1. ✗ रु. 3500.25
2. ✓ रु. 4171.25
3. ✗ रु. 3800.25
4. ✗ रु. 3900.25

Question Number : 26 Question Id : 7368155278 Question Type : MCQ Option Shuffling : Yes Display Question Number : Yes  
Single Line Question Option : No Option Orientation : Vertical

Correct : 1 Wrong : 0.25

Simple interest on a certain sum is  $\frac{36}{25}$  of the sum. Find the time, if both time and rate percent are numerically equal.

Options :

1. ✗  $1\frac{1}{2}$  years

2. ✓ 12years  
3. ✗ 5years  
4. ✗  $2\frac{1}{2}$  years

Question Number : 26 Question Id : 7368155278 Question Type : MCQ Option Shuffling : Yes Display Question Number : Yes  
Single Line Question Option : No Option Orientation : Vertical

Correct : 1 Wrong : 0.25

एक निश्चित राशि साधारण ब्याज राशी का  $\frac{36}{25}$  है। यदि समय और प्रतिशत दर संख्या के अनुसार एक समान हैं, तो समय का पता लगाएं।

Options :

1. ✗  $1\frac{1}{2}$  वर्ष  
2. ✓ 12 वर्ष  
3. ✗ 5 वर्ष  
4. ✗  $2\frac{1}{2}$  वर्ष

Question Number : 27 Question Id : 7368155279 Question Type : MCQ Option Shuffling : Yes Display Question Number : Yes  
Single Line Question Option : No Option Orientation : Vertical

Correct : 1 Wrong : 0.25

Simple interest for a sum of Rs.4500 for 2 years is Rs.50 more than the simple interest for Rs.4000 for the same duration. Find the rate of interest.

Options :

1. ✗ 2%  
2. ✓ 5%  
3. ✗ 4%  
4. ✗ 3%

Question Number : 27 Question Id : 7368155279 Question Type : MCQ Option Shuffling : Yes Display Question Number : Yes  
Single Line Question Option : No Option Orientation : Vertical

Correct : 1 Wrong : 0.25

2 वर्ष के लिए रु. 4500 की राशि पर साधारण ब्याज और उसी अवधि के लिए रु. 4000 के लिए साधारण ब्याज की तुलना में सिर्फ रु.50 से अधिक है। ब्याज की दर का पता लगाएं।

Options :

1. ✗ 2%  
2. ✓ 5%  
3. ✗ 4%  
4. ✗ 3%

Question Number : 28 Question  
Single Line Question Option : N

Latest Sarkari Jobs, Govt Exam Results,  
Vacancies and updates on one click

Know More

lay Question Number : Yes



Correct : 1 Wrong : 0.25

A Book costing Rs.1550 has been sold for Rs.1922. The percentage of profit was?

Options :

1. ✘ 21%
2. ✘ 25%
3. ✔ 24%
4. ✘ 20%

Question Number : 28 Question Id : 7368155280 Question Type : MCQ Option Shuffling : Yes Display Question Number : Yes  
Single Line Question Option : No Option Orientation : Vertical

Correct : 1 Wrong : 0.25

रु.1550 की कीमत वाली किताब को रु. 1922 में बेच दिया गया। कुल लाभ का प्रतिशत कितना है?

Options :

1. ✘ 21%
2. ✘ 25%
3. ✔ 24%
4. ✘ 20%

Question Number : 29 Question Id : 7368155281 Question Type : MCQ Option Shuffling : Yes Display Question Number : Yes  
Single Line Question Option : No Option Orientation : Vertical

Correct : 1 Wrong : 0.25

Srija sells an item for Rs.2800. She loses 65% in the bargain. What was the price at which she bought it?

Options :

1. ✘ Rs.12000
2. ✔ Rs.8000
3. ✘ Rs.11000
4. ✘ Rs.20500.25

Question Number : 29 Question Id : 7368155281 Question Type : MCQ Option Shuffling : Yes Display Question Number : Yes  
Single Line Question Option : No Option Orientation : Vertical

Correct : 1 Wrong : 0.25

सृजा एक वस्तु रु.2800 में बेचती है। उसे इस सौदेबाज़ी में 65% का नुकसान हुआ। उसने वह वस्तु कितनी कीमत में खरीदी थी?

Options :

1. ✘ रु.12000
2. ✔ रु.8000
3. ✘ रु.11000
4. ✘ रु.20500.25

Question Number : 30 Question Id : 7368155282 Question Type : MCQ Option Shuffling : Yes Display Question Number : Yes  
Single Line Question Option : No Option Orientation : Vertical

Correct : 1 Wrong : 0.25

Rachana bought an article for Rs.3736. Due to some defects in it, she had to pay Rs.264 to the mechanic for its repair. Then, she sold it for Rs.3600. Find her loss percent.

Options :

1. ✓ 10%
2. ✗ 12.46%
3. ✗ 15%
4. ✗ 12.5%

Question Number : 30 Question Id : 7368155282 Question Type : MCQ Option Shuffling : Yes Display Question Number : Yes  
Single Line Question Option : No Option Orientation : Vertical

Correct : 1 Wrong : 0.25

रचना ने रु.3736 में एक वस्तु खरीदी। उसमें किसी दोष के कारण, उसने इसकी मरम्मत के लिए मैकेनिक को रु.264 दिए। फिर उसने इसे रु.3600 में बेच दिया। उसे कितना प्रतिशत नुकसान हुआ?

Options :

1. ✓ 10%
2. ✗ 12.46%
3. ✗ 15%
4. ✗ 12.5%

Question Number : 31 Question Id : 7368155283 Question Type : MCQ Option Shuffling : Yes Display Question Number : Yes  
Single Line Question Option : No Option Orientation : Vertical

Correct : 1 Wrong : 0.25

An item is sold at Rs.425 by allowing a discount of 15% on its marked price. The marked price of the item is?

Options :

1. ✗ Rs.700
2. ✓ Rs.500
3. ✗ Rs.600
4. ✗ Rs.650

Question Number : 31 Question Id : 7368155283 Question Type : MCQ Option Shuffling : Yes Display Question Number : Yes  
Single Line Question Option : No Option Orientation : Vertical

Correct : 1 Wrong : 0.25

एक वस्तु को उसकी अंकित कीमत से 15% की छूट देकर रु.425 में बेचा जाता है। वस्तु पर अंकित कीमत कितनी थी?

Options :

1. ✗ रु. 700
2. ✓ रु. 500

3. ✖ ₹. 600

4. ✖ ₹. 650

Question Number : 32 Question Id : 7368155284 Question Type : MCQ Option Shuffling : Yes Display Question Number : Yes  
Single Line Question Option : No Option Orientation : Vertical

Correct : 1 Wrong : 0.25

What is a single discount equivalent to a discount series of 10% and 12%?

Options :

1. ✖ 24.5%

2. ✔ 20.8%

3. ✖ 25%

4. ✖ 26%

Question Number : 32 Question Id : 7368155284 Question Type : MCQ Option Shuffling : Yes Display Question Number : Yes  
Single Line Question Option : No Option Orientation : Vertical

Correct : 1 Wrong : 0.25

10% और 12% की छूट श्रृंखला के समान छूट कितनी है?

Options :

1. ✖ 24.5%

2. ✔ 20.8%

3. ✖ 25%

4. ✖ 26%

Question Number : 33 Question Id : 7368155285 Question Type : MCQ Option Shuffling : Yes Display Question Number : Yes  
Single Line Question Option : No Option Orientation : Vertical

Correct : 1 Wrong : 0.25

The marked price of a bicycle is Rs.4600. A shopkeeper allows a discount of 15% and get a profit of 15%. Find the cost price of the bicycle.

Options :

1. ✖ Rs.3850

2. ✖ Rs.1900

3. ✔ Rs.3400

4. ✖ Rs.3950

Question Number : 33 Question Id : 7368155285 Question Type : MCQ Option Shuffling : Yes Display Question Number : Yes  
Single Line Question Option : No Option Orientation : Vertical

Correct : 1 Wrong : 0.25

एक साइकिल की बाज़ार में कीमत रु.4600 है। एक दुकानदार 15% की छूट की अनुमति देता है और उसे 15% का लाभ मिलता है। साइकिल की कुल लागत का पता लगाए।

Options :

1. ✖ रु. 3850

2. ✖ रु. 1900

3. ✓ ₹. 3400

4. ✗ ₹. 3950

Question Number : 34 Question Id : 7368155286 Question Type : MCQ Option Shuffling : Yes Display Question Number : Yes  
Single Line Question Option : No Option Orientation : Vertical

Correct : 1 Wrong : 0.25

Study the following table carefully and answer the question that follows.

RURAL AND URBAN POPULATION

CENSUS YEAR	PERCENTAGE OF TOTAL POPULATION	
	RURAL	URBAN
1951	82.70	17.30
1961	82.00	18.00
1971	80.10	19.90
1981	76.70	23.30
1991	74.30	25.70
2001	72.20	27.80
2011	68.85	31.15

In which year the urban population was approximately one-fourth of the total population?

Options :

1. ✗ 2001

2. ✗ 1981

3. ✗ 1951

4. ✓ 1991

Question Number : 34 Question Id : 7368155286 Question Type : MCQ Option Shuffling : Yes Display Question Number : Yes  
Single Line Question Option : No Option Orientation : Vertical

Correct : 1 Wrong : 0.25

निम्नलिखित तालिका का ध्यान से अध्ययन करें और निम्नलिखित सवालो के जवाब दें।

ग्रामीण और शहरी जनसंख्या

जनगणना वर्ष	कुल जनसंख्या का प्रतिशत	
	ग्रामीण	शहरी
1951	82.70	17.30
1961	82.00	18.00
1971	80.10	19.90
1981	76.70	23.30
1991	74.30	25.70
2001	72.20	27.80
2011	68.85	31.15

किस वर्ष में शहरी आबादी कुल आबादी की लगभग  $\frac{1}{4}$  थी?

Options :

- ✘ 2001
- ✘ 1981
- ✘ 1951
- ✔ 1991

Question Number : 35 Question Id : 7368155287 Question Type : MCQ Option Shuffling : Yes Display Question Number : Yes Single Line Question Option : No Option Orientation : Vertical

Correct : 1 Wrong : 0.25

Study the following table carefully and answer the question that follows.

RURAL AND URBAN POPULATION

CENSUS YEAR	PERCENTAGE OF TOTAL POPULATION	
	RURAL	URBAN
1951	82.70	17.30
1961	82.00	18.00
1971	80.10	19.90
1981	76.70	23.30
1991	74.30	25.70
2001	72.20	27.80
2011	68.85	31.15

In which year the rural population was approximately four-fifth of the total population?

Options :

- ✘ 1961
- ✘ 1951
- ✔ 1971

4. ✖ 1981

Question Number : 35 Question Id : 7368155287 Question Type : MCQ Option Shuffling : Yes Display Question Number : Yes  
Single Line Question Option : No Option Orientation : Vertical

Correct : 1 Wrong : 0.25

निम्नलिखित तालिका का ध्यान से अध्ययन करें और निम्नलिखित सवालो के जवाब दें।

ग्रामीण और शहरी जनसंख्या

जनगणना वर्ष	कुल जनसंख्या का प्रतिशत	
	ग्रामीण	शहरी
1951	82.70	17.30
1961	82.00	18.00
1971	80.10	19.90
1981	76.70	23.30
1991	74.30	25.70
2001	72.20	27.80
2011	68.85	31.15

किस वर्ष में ग्रामीण आबादी कुल आबादी का लगभग 4/5 था ?

Options :

1. ✖ 1961
2. ✖ 1951
3. ✔ 1971
4. ✖ 1981

Question Number : 36 Question Id : 7368155288 Question Type : MCQ Option Shuffling : Yes Display Question Number : Yes  
Single Line Question Option : No Option Orientation : Vertical

Correct : 1 Wrong : 0.25

Study the following table carefully and answer the question that follows.

RURAL AND URBAN POPULATION

CENSUS YEAR	PERCENTAGE OF TOTAL POPULATION	
	RURAL	URBAN
1951	82.70	17.30
1961	82.00	18.00
1971	80.10	19.90
1981	76.70	23.30
1991	74.30	25.70
2001	72.20	27.80
2011	68.85	31.15

In which year the urban population was 18% of the total population?

Options :

Latest Sarkari Jobs, Govt Exam Results,  
Vacancies and updates on one click

Know More

1. ✘ 1981
2. ✘ 1951
3. ✔ 1961
4. ✘ 2001

Question Number : 36 Question Id : 7368155288 Question Type : MCQ Option Shuffling : Yes Display Question Number : Yes  
Single Line Question Option : No Option Orientation : Vertical

Correct : 1 Wrong : 0.25

निम्नलिखित तालिका का ध्यान से अध्ययन करें और निम्नलिखित सवालो के जवाब दें।  
ग्रामीण और शहरी जनसंख्या

जनगणना वर्ष	कुल जनसंख्या का प्रतिशत	
	ग्रामीण	शहरी
1951	82.70	17.30
1961	82.00	18.00
1971	80.10	19.90
1981	76.70	23.30
1991	74.30	25.70
2001	72.20	27.80
2011	68.85	31.15

किस वर्ष में शहर की आबादी कुल आबादी का 18% थी?

Options :

1. ✘ 1981
2. ✘ 1951
3. ✔ 1961
4. ✘ 2001

Question Number : 37 Question Id : 7368155289 Question Type : MCQ Option Shuffling : Yes Display Question Number : Yes  
Single Line Question Option : No Option Orientation : Vertical

Correct : 1 Wrong : 0.25

Study the following table carefully and answer the question that follows.

RURAL AND URBAN POPULATION

CENSUS YEAR	PERCENTAGE OF TOTAL POPULATION	
	RURAL	URBAN
1951	82.70	17.30
1961	82.00	18.00
1971	80.10	19.90
1981	76.70	23.30
1991	74.30	25.70
2001	72.20	27.80
2011	68.85	31.15

In which year the rural population was 72.2% of the total population?

Options :

- ✓ 2001
- ✗ 2011
- ✗ 1991
- ✗ 1981

Question Number : 37 Question Id : 7368155289 Question Type : MCQ Option Shuffling : Yes Display Question Number : Yes Single Line Question Option : No Option Orientation : Vertical

Correct : 1 Wrong : 0.25

निम्नलिखित तालिका का ध्यान से अध्ययन करें और निम्नलिखित सवालो के जवाब दें।

ग्रामीण और शहरी जनसंख्या

जनगणना वर्ष	कुल जनसंख्या का प्रतिशत	
	ग्रामीण	शहरी
1951	82.70	17.30
1961	82.00	18.00
1971	80.10	19.90
1981	76.70	23.30
1991	74.30	25.70
2001	72.20	27.80
2011	68.85	31.15

किस वर्ष में ग्रामीण आबादी कुल आबादी का 72.2% थी?

Options :

- ✓ 2001
- ✗ 2011
- ✗ 1991



4. ✖ 1981

Question Number : 38 Question Id : 7368155290 Question Type : MCQ Option Shuffling : Yes Display Question Number : Yes  
Single Line Question Option : No Option Orientation : Vertical

Correct : 1 Wrong : 0.25

Study the following table carefully and answer the question that follows.

RURAL AND URBAN POPULATION

CENSUS YEAR	PERCENTAGE OF TOTAL POPULATION	
	RURAL	URBAN
1951	82.70	17.30
1961	82.00	18.00
1971	80.10	19.90
1981	76.70	23.30
1991	74.30	25.70
2001	72.20	27.80
2011	68.85	31.15

In which year the rural population was high?

Options :

- ✖ 1991
- ✖ 2011
- ✖ 2001
- ✔ 1951

Question Number : 38 Question Id : 7368155290 Question Type : MCQ Option Shuffling : Yes Display Question Number : Yes  
Single Line Question Option : No Option Orientation : Vertical

Correct : 1 Wrong : 0.25

निम्नलिखित तालिका का ध्यान से अध्ययन करें और निम्नलिखित सवालो के जवाब दें।

ग्रामीण और शहरी जनसंख्या

जनगणना वर्ष	कुल जनसंख्या का प्रतिशत	
	ग्रामीण	शहरी
1951	82.70	17.30
1961	82.00	18.00
1971	80.10	19.90
1981	76.70	23.30
1991	74.30	25.70
2001	72.20	27.80
2011	68.85	31.15

किस वर्ष में ग्रामीण आबादी अधिक थी?

Options :

- ✖ 1991

2. ✘ 2011
3. ✘ 2001
4. ✔ 1951

Question Number : 39 Question Id : 7368155291 Question Type : MCQ Option Shuffling : Yes Display Question Number : Yes  
Single Line Question Option : No Option Orientation : Vertical

Correct : 1 Wrong : 0.25

The area of a square field is  $\frac{5}{2}$  hectare. Find the length of its diagonal in metres.

Options :

1. ✘ 50 mts
2. ✘  $50\sqrt{2}$  mts
3. ✘ 40 mts
4. ✔  $100\sqrt{5}$  mts

Question Number : 39 Question Id : 7368155291 Question Type : MCQ Option Shuffling : Yes Display Question Number : Yes  
Single Line Question Option : No Option Orientation : Vertical

Correct : 1 Wrong : 0.25

एक वर्ग क्षेत्र का क्षेत्रफल  $\frac{5}{2}$  हेक्टेयर है। इसके विकर्ण की लंबाई का मीटर में पता लगाएं।

Options :

1. ✘ 50 मीटर
2. ✘  $50\sqrt{2}$  मीटर
3. ✘ 40 मीटर
4. ✔  $100\sqrt{5}$  मीटर

Question Number : 40 Question Id : 7368155292 Question Type : MCQ Option Shuffling : Yes Display Question Number : Yes  
Single Line Question Option : No Option Orientation : Vertical

Correct : 1 Wrong : 0.25

The area of an equilateral triangle is  $12\sqrt{3}cm^2$ . Find the length of its side.

Options :

1. ✘ 4cm
2. ✔  $4\sqrt{3}cm$
3. ✘ 4.45cm
4. ✘ 4.25cm

Question Number : 40 Question Id : 7368155292 Question Type : MCQ Option Shuffling : Yes Display Question Number : Yes  
Single Line Question Option : No Option Orientation : Vertical

Correct : 1 Wrong : 0.25

एक समभुज त्रिकोण का क्षेत्रफल  $12\sqrt{3}$  सेमी<sup>2</sup> होता है। इसकी क्षेत्र की लंबाई का पता लगाएं।

Options :

1. ✘ 4 सेमी
2. ✔  $4\sqrt{3}$  सेमी
3. ✘ 4.45 सेमी
4. ✘ 4.25 सेमी

Question Number : 41 Question Id : 7368155293 Question Type : MCQ Option Shuffling : Yes Display Question Number : Yes Single Line Question Option : No Option Orientation : Vertical

Correct : 1 Wrong : 0.25

The diameter of the wheel of a bus is 14cm. How many revolutions will it make to travel 2.2km?

Options :

1. ✘ 4000
2. ✘ 6000
3. ✘ 6500
4. ✔ 5000

Question Number : 41 Question Id : 7368155293 Question Type : MCQ Option Shuffling : Yes Display Question Number : Yes Single Line Question Option : No Option Orientation : Vertical

Correct : 1 Wrong : 0.25

एक बस के पहिये का व्यास 14 सेमी है। कितने चक्र में यह 2.2 किलोमीटर की यात्रा पूरी करेगी?

Options :

1. ✘ 4000
2. ✘ 6000
3. ✘ 6500
4. ✔ 5000

Question Number : 42 Question Id : 7368155294 Question Type : MCQ Option Shuffling : Yes Display Question Number : Yes Single Line Question Option : No Option Orientation : Vertical

Correct : 1 Wrong : 0.25

A car travels 755km in 12hours and another 445km in 8hours. Find the average speed of the car.

Options :

1. ✘ 52 km/h
2. ✘ 50 km/h
3. ✔ 60 km/h
4. ✘ 48 km/h

Question Number : 42 Question Id : 7368155294 Question Type : MCQ Option Shuffling : Yes Display Question Number : Yes  
Single Line Question Option : No Option Orientation : Vertical

Correct : 1 Wrong : 0.25

एक कार 12 घंटे में 755 किलोमीटर और 8 घंटे में अन्य 445 किलोमीटर की यात्रा करती है। कार की औसत गति कितनी है?

Options :

1. ✘ 52 किमी/घंटे
2. ✘ 50 किमी/घंटे
3. ✔ 60 किमी/घंटे
4. ✘ 48 किमी/घंटे

Question Number : 43 Question Id : 7368155295 Question Type : MCQ Option Shuffling : Yes Display Question Number : Yes  
Single Line Question Option : No Option Orientation : Vertical

Correct : 1 Wrong : 0.25

A vehicle travels at 60km/h. How many meters will it travel in 20minutes?

Options :

1. ✘ 10500 mts
2. ✔ 20000 mts
3. ✘ 25000 mts
4. ✘ 20500 mts

Question Number : 43 Question Id : 7368155295 Question Type : MCQ Option Shuffling : Yes Display Question Number : Yes  
Single Line Question Option : No Option Orientation : Vertical

Correct : 1 Wrong : 0.25

एक वाहन 60 किमी/घंटे की गति से यात्रा करता है। यह 20 मिनट में कितने मीटर की दूरी तय करेगा?

Options :

1. ✘ 10500 मीटर
2. ✔ 20000 मीटर
3. ✘ 25000 मीटर
4. ✘ 20500 मीटर

Question Number : 44 Question Id : 7368155296 Question Type : MCQ Option Shuffling : Yes Display Question Number : Yes  
Single Line Question Option : No Option Orientation : Vertical

Correct : 1 Wrong : 0.25

Sachin can cover a certain distance in 2hr 30min by covering two-third of the distance at 4kmph and the rest at 5kmph. Find the total distance.

Options :

1. ✘ 9.7km
2. ✘ 10.4km
3. ✘ 9.5km

4. ✓ 10.7km

Question Number : 44 Question Id : 7368155296 Question Type : MCQ Option Shuffling : Yes Display Question Number : Yes  
Single Line Question Option : No Option Orientation : Vertical

Correct : 1 Wrong : 0.25

सचिन एक निश्चित दूरी 2 घंटे 30 मिनट में पूरी कर सकता है जिसमें से दो-तिहाई 4 किमी/घंटा की गति से और शेष 5 किमी/घंटा द्वारा तय कर सकता है। कुल दूरी का पता लगाएं।

Options :

1. ✗ 9.7 किलोमीटर
2. ✗ 10.4 किलोमीटर
3. ✗ 9.5 किलोमीटर
4. ✓ 10.7 किलोमीटर

Question Number : 45 Question Id : 7368155297 Question Type : MCQ Option Shuffling : Yes Display Question Number : Yes  
Single Line Question Option : No Option Orientation : Vertical

Correct : 1 Wrong : 0.25

Priyanka takes 36 minutes to reach school from home. Monika takes 45minutes to cover the same distance. Find the ratio of time taken by Priyanka to the time taken by Monika.

Options :

1. ✗ 3:2
2. ✗ 4:3
3. ✓ 4:5
4. ✗ 1:3

Question Number : 45 Question Id : 7368155297 Question Type : MCQ Option Shuffling : Yes Display Question Number : Yes  
Single Line Question Option : No Option Orientation : Vertical

Correct : 1 Wrong : 0.25

प्रियंका घर से स्कूल तक पहुंचने के लिए 36 मिनट लेती है। मोनिका इतनी ही दूरी को पूरा करने के लिए 45 मिनट लेती है। प्रियंका द्वारा और मोनिका द्वारा लिए गए समय का अनुपात पता लगाएं।

Options :

1. ✗ 3:2
2. ✗ 4:3
3. ✓ 4:5
4. ✗ 1:3

Question Number : 46 Question Id : 7368155298 Question Type : MCQ Option Shuffling : Yes Display Question Number : Yes  
Single Line Question Option : No Option Orientation : Vertical

Correct : 1 Wrong : 0.25

Sonia works in office for 5 hours 20 minutes and Indira works for 5 hours in her office. Find the ratio of their working hours.

Options :

1. ✘ 15:16
2. ✘ 14:13
3. ✔ 16:15
4. ✘ 16:17

Question Number : 46 Question Id : 7368155298 Question Type : MCQ Option Shuffling : Yes Display Question Number : Yes  
Single Line Question Option : No Option Orientation : Vertical

Correct : 1 Wrong : 0.25

सोनिया कार्यालय में 5 घंटे 20 मिनट और इंदिरा अपने कार्यालय में 5 घंटे काम करती है। उनके काम के घंटे के अनुपात का पता लगाएं।

Options :

1. ✘ 15:16
2. ✘ 14:13
3. ✔ 16:15
4. ✘ 16:17

Question Number : 47 Question Id : 7368155299 Question Type : MCQ Option Shuffling : Yes Display Question Number : Yes  
Single Line Question Option : No Option Orientation : Vertical

Correct : 1 Wrong : 0.25

The ratio of times taken by A and B to finish a piece of work is 1:4. If A completes the work in 12 days, then find the time taken by B to complete the work.

Options :

1. ✘ 15 days
2. ✔ 48 days
3. ✘ 45 days
4. ✘ 18 days

Question Number : 47 Question Id : 7368155299 Question Type : MCQ Option Shuffling : Yes Display Question Number : Yes  
Single Line Question Option : No Option Orientation : Vertical

Correct : 1 Wrong : 0.25

A और B द्वारा एक काम को खत्म करने के लिए, लिए गए समय का अनुपात 1: 4 है। यदि A उस काम को 12 दिन में पूरा करता है, तो B उसी काम को पूरा करने के लिए कितना समय लेगा?

Options :

1. ✘ 15 दिन
2. ✔ 48 दिन
3. ✘ 45 दिन
4. ✘ 18 दिन

Question Number : 48 Question Id : 7368155300 Question Type : MCQ Option Shuffling : Yes Display Question Number : Yes  
Single Line Question Option : No Option Orientation : Vertical

Correct : 1 Wrong : 0.25

Sonal can do a work in 4 days and Aliya is 20% more expert than Sonal to complete the same work, then find the total time taken to complete the work by Aliya.

Options :

1. ✓  $3\frac{1}{3}$  days
2. ✗  $4\frac{1}{2}$  days
3. ✗  $4\frac{1}{4}$  days
4. ✗ 6 days

Question Number : 48 Question Id : 7368155300 Question Type : MCQ Option Shuffling : Yes Display Question Number : Yes  
Single Line Question Option : No Option Orientation : Vertical

Correct : 1 Wrong : 0.25

सोनल 4 दिन में एक काम कर सकती है, और आलिया उसी काम को सोनल की तुलना में 20% अधिक अच्छी तरीके से कर सकती है तो आलिया द्वारा काम को पूरा करने के कुल समय का पता लगाएं।

Options :

1. ✓  $3\frac{1}{3}$  दिन
2. ✗  $4\frac{1}{2}$  दिन
3. ✗  $4\frac{1}{4}$  दिन
4. ✗ 6 दिन

Question Number : 49 Question Id : 7368155301 Question Type : MCQ Option Shuffling : Yes Display Question Number : Yes  
Single Line Question Option : No Option Orientation : Vertical

Correct : 1 Wrong : 0.25

If A can do a piece of work in 4 days, B can do the same in 6 days and C can do the same work in 2 days, then working together, how many days will they take to complete the work?

Options :

1. ✓  $1\frac{1}{11}$  days
2. ✗ 9 days
3. ✗  $2\frac{1}{2}$  days
4. ✗ 24 days

Question Number : 49 Question Id : 7368155301 Question Type : MCQ Option Shuffling : Yes Display Question Number : Yes  
Single Line Question Option : No Option Orientation : Vertical

Correct : 1 Wrong : 0.25

यदि A 4 दिन में एक काम कर सकता है, B वही काम 6 दिन में और C 2 दिन में कर सकता है, तो उन्हें एक साथ काम को पूरा करने के लिए कितने दिन लगेंगे?

Options :

1. ✓  $1\frac{1}{11}$  दिन
2. ✗ 9 दिन
3. ✗  $2\frac{1}{2}$  दिन
4. ✗ 24 दिन

Question Number : 50 Question Id : 7368155302 Question Type : MCQ Option Shuffling : Yes Display Question Number : Yes Single Line Question Option : No Option Orientation : Vertical

Correct : 1 Wrong : 0.25

30 men can complete a work in 21 days. 7 days after they started working, 15 more men joined them. How many days will they now take to complete the remaining work?

Options :

1. ✗  $6\frac{2}{3}$  days
2. ✗  $6\frac{1}{5}$  days
3. ✗  $7\frac{2}{3}$  days
4. ✓  $9\frac{1}{3}$  days

Question Number : 50 Question Id : 7368155302 Question Type : MCQ Option Shuffling : Yes Display Question Number : Yes Single Line Question Option : No Option Orientation : Vertical

Correct : 1 Wrong : 0.25

30 पुरुष 21 दिनों में एक काम को पूरा कर सकते हैं। काम शुरू करने के 7 दिन बाद, 15 और पुरुष उनमें शामिल हो गए। अब शेष कितने दिनों में वे काम को पूरा करेंगे ?

Options :

1. ✗  $6\frac{2}{3}$  दिन
2. ✗  $6\frac{1}{5}$  दिन
3. ✗  $7\frac{2}{3}$  दिन
4. ✓  $9\frac{1}{3}$  दिन

English Language

Section Id :

Section Number :

Latest Sarkari Jobs, Govt Exam Results,  
Vacancies and updates on one click

Know More



Section type :	Online
Mandatory or Optional:	Mandatory
Number of Questions:	32
Number of Questions to be attempted:	32
Section Marks:	50
Display Number Panel:	Yes
Group All Questions:	No

Sub-Section Number:	1
Sub-Section Id:	736815156
Question Shuffling Allowed :	No

**Question Id : 7368155303 Question Type : COMPREHENSION Sub Question Shuffling Allowed : No Group Comprehension Questions : No**

**Question Numbers : (51 to 60)**

Question Label : Comprehension

Read the following account and answer the questions given under it by choosing the correct option for each question:

What has emerged in recent times as crucially important to controlling public opinion and communication is “framing” the debate—using language effectively to define the issues. People can be easily swayed by political catchphrases that are intentionally crafted to convince and direct us into making certain choices. It doesn’t have to be complicated; in fact, the simpler the words, the more effective they often are.

George Lakoff, an eminent linguist, explains how each word in these seemingly innocuous phrases – tax relief; death tax – frames exactly how we’re supposed to think, even as we’re unaware of it. Taking up “tax relief”, Lakoff says that newspapers treated them as if it were a neutral term, which it is not. Because the frame for “relief” assumes there has to be an affliction – causing pain or sorrow -- and an afflicted individual(s). The relief-provider is the hero, and anybody opposing or stopping relief is the bad guy. The second rule or principle people accept as true is that taxation is affliction,

Along with the assumption ‘taxes are bad’, we would also assume that “death tax” is immoral and ominous. An understanding of this helped the Republican machine to nose-lead Americans to opposing death tax. Simply by changing the name, it changed the frame of perception. When “estate tax” on the rich who could easily afford it was re-christened ‘death-tax’ and then it was proposed that it be abolished, a significant majority supported it. The supporters may not have or know what an estate is, but they certainly knew what it meant to be taxed when they died; they declared “taxing at death is immoral”.

Sub questions

**Question Number : 51 Question Id : 7368155304 Question Type : MCQ Option Shuffling : Yes Display Question Number : Yes Single Line Question Option : No Option Orientation : Vertical**

**Correct : 1 Wrong : 0.25**

The most suitable title for this article is

Options :

1. ✘ Don't Pay Taxes
2. ✔ Language Controls How We React

3. ✘ You have been framed – Wake up!

4. ✘ No Tax Relief Even When You Are Dead

Question Number : 52 Question Id : 7368155305 Question Type : MCQ Option Shuffling : Yes Display Question Number : Yes  
Single Line Question Option : No Option Orientation : Vertical

Correct : 1 Wrong : 0.25

The most significant idea in this article is that

Options :

1. ✔ Politicians use languages to frame our thoughts and feelings

2. ✘ In matter of taxation our assumptions are always right

3. ✘ As vindicated in the case of 'death-tax', words can be chosen to control our reactions

4. ✘ All of us want tax-relief but none of us is willing to pay death-tax

Question Number : 53 Question Id : 7368155306 Question Type : MCQ Option Shuffling : Yes Display Question Number : Yes  
Single Line Question Option : No Option Orientation : Vertical

Correct : 1 Wrong : 0.25

The curious case of estate-tax becoming death-tax illustrates

Options :

1. ✘ How well politicians understand our assumptions regarding words 'frame' our thoughts

2. ✔ How well politicians understand the frames language contains, and how these frames lead us to or prevent us from certain actions associated with them

3. ✘ How by changing a name, people's assumptions can be acted upon and how they may be made to comply with decisions

4. ✘ How the support of the poor in politics and government enables the rich to garner benefits from the rulers.

Question Number : 54 Question Id : 7368155307 Question Type : MCQ Option Shuffling : Yes Display Question Number : Yes  
Single Line Question Option : No Option Orientation : Vertical

Correct : 1 Wrong : 0.25

Lakoff

Options :

1. ✘ Shows that all words have agents, recipients and beneficiaries, and values attached to them.

2. ✘ Shows that only words like tax, relief and death have 'frames', which activate default values.

3. ✔ Holds that words are more than meanings and that they as 'regulators' of the implicit world-view, 'imply' actions and values – that is, they are frames.

4. ✘ Holds that words may sound innocent but they carry associated values and that is why language controls as well as communicates meaning.

Question Number : 55 Question Id : 7368155308 Question Type : MCQ Option Shuffling : Yes Display Question Number : Yes  
Single Line Question Option : No Option Orientation : Vertical

Correct : 1 Wrong : 0.25

The frame for the word 'lend' will assume a lender, a borrower and

Options :

1. ✘ A need and an obj

- An object or cash changing hands; the word will evoke unequal relationships between the parties
2. ✓
- An object, a need, a time frame for lending and repayment and changes in relationship between the parties
3. ✗
- An object, a record, and legal tangles will be the evoked thoughts
4. ✗

Question Number : 56 Question Id : 7368155309 Question Type : MCQ Option Shuffling : Yes Display Question Number : Yes  
Single Line Question Option : No Option Orientation : Vertical

Correct : 1 Wrong : 0.25

The synonym for the word 'ominous' as used here is

Options :

1. ✓ Worrying
2. ✗ Menacing
3. ✗ Gloomy
4. ✗ Unpromising

Question Number : 57 Question Id : 7368155310 Question Type : MCQ Option Shuffling : Yes Display Question Number : Yes  
Single Line Question Option : No Option Orientation : Vertical

Correct : 1 Wrong : 0.25

Identify the antonym of 'innocuous', keeping in mind the meaning it has here:

Options :

1. ✗ Offensive
2. ✗ Mischievous
3. ✗ Dangerous
4. ✓ Motivated

Question Number : 58 Question Id : 7368155311 Question Type : MCQ Option Shuffling : Yes Display Question Number : Yes  
Single Line Question Option : No Option Orientation : Vertical

Correct : 1 Wrong : 0.25

Political catchphrases can sway us as:

Options :

1. ✗ they are carefully spoken
2. ✗ they are carefully constructed
3. ✗ they are clearly constructed
4. ✓ they are cleverly constructed

Question Number : 59 Question Id : 7368155312 Question Type : MCQ Option Shuffling : Yes Display Question Number : Yes  
Single Line Question Option : No Option Orientation : Vertical

Correct : 1 Wrong : 0.25

'Tax relief' is not a neutral term as:

Options :

1. ✗ a neutral term will have no identifiable frame to regulate our reactions
2. ✓ a neutral term will operate with no assumptions and expectations
3. ✗ a neutral term will

4. ✘ a neutral term will have no history or context behind it

Question Number : 60 Question Id : 7368155313 Question Type : MCQ Option Shuffling : Yes Display Question Number : Yes  
Single Line Question Option : No Option Orientation : Vertical

Correct : 1 Wrong : 0.25

In the phrase, 'using language effectively to define the issues', defining means:

Options :

1. ✘ explaining the meaning of a word, phrase, etc.
2. ✘ showing or describing (someone or something) clearly and completely
3. ✘ showing the shape, outline, or edge of (something) very clearly
4. ✔ marking the boundaries of the related concept/object/action

Question Id : 7368155303 Question Type : COMPREHENSION Sub Question Shuffling Allowed : No Group Comprehension  
Questions : No

Question Numbers : (51 to 60)

Question Label : Comprehension

Prepp

Read the following account and answer the questions given under it by choosing the correct option for each question:

What has emerged in recent times as crucially important to controlling public opinion and communication is “framing” the debate—using language effectively to define the issues. People can be easily swayed by political catchphrases that are intentionally crafted to convince and direct us into making certain choices. It doesn't have to be complicated; in fact, the simpler the words, the more effective they often are.

George Lakoff, an eminent linguist, explains how each word in these seemingly innocuous phrases - tax relief; death tax - frames exactly how we're supposed to think, even as we're unaware of it. Taking up “tax relief”, Lakoff says that newspapers treated them as if it were a neutral term, which it is not. Because the frame for “relief” assumes there has to be an affliction - causing pain or sorrow -- and an afflicted individual(s). The relief-provider is the hero, and anybody opposing or stopping relief is the bad guy. The second rule or principle people accept as true is that taxation is affliction,

Along with the assumption ‘taxes are bad’, we would also assume that “death tax” is immoral and ominous. An understanding of this helped the Republican machine to nose-lead Americans to opposing death tax. Simply by changing the name, it changed the frame of perception. When “estate tax” on the rich who could easily afford it was re-christened ‘death-tax’ and then it was proposed that it be abolished, a significant majority supported it. The supporters may not have or know what an estate is, but they certainly knew what it meant to be taxed when they died; they declared “taxing at death is immoral”.

Sub questions

Question Number : 51 Question  
Single Line Question Option : N

Latest Sarkari Jobs, Govt Exam Results,  
Vacancies and updates on one click

Know More

Day Question Number : Yes

Correct : 1 Wrong : 0.25

The most suitable title for this article is

Options :

1. ✘ Don't Pay Taxes
2. ✔ Language Controls How We React
3. ✘ You have been framed - Wake up!
4. ✘ No Tax Relief Even When You Are Dead

Question Number : 52 Question Id : 7368155305 Question Type : MCQ Option Shuffling : Yes Display Question Number : Yes  
Single Line Question Option : No Option Orientation : Vertical

Correct : 1 Wrong : 0.25

The most significant idea in this article is that

Options :

1. ✔ Politicians use languages to frame our thoughts and feelings
2. ✘ In matter of taxation our assumptions are always right  
As vindicated in the case of 'death-tax', words can be chosen to control  
our reactions
3. ✘ our reactions
4. ✘ All of us want tax-relief but none of us is willing to pay death-tax

Question Number : 53 Question Id : 7368155306 Question Type : MCQ Option Shuffling : Yes Display Question Number : Yes  
Single Line Question Option : No Option Orientation : Vertical

Correct : 1 Wrong : 0.25

The curious case of estate-tax becoming death-tax illustrates

Options :

1. ✘ How well politicians understand our assumptions regarding words 'frame'  
our thoughts
2. ✔ How well politicians understand the frames language contains, and how  
these frames lead us to or prevent us from certain actions associated with  
them
3. ✘ How by changing a name, people's assumptions can be acted upon and  
how they may be made to comply with decisions
4. ✘ How the support of the poor in politics and government enables the rich  
to garner benefits from the rulers.

Question Number : 54 Question Id : 7368155307 Question Type : MCQ Option Shuffling : Yes Display Question Number : Yes  
Single Line Question Option : No Option Orientation : Vertical

Correct : 1 Wrong : 0.25

Lakoff

Options :

1. ✘ Shows that all words have agents, recipients and beneficiaries, and values  
attached to them.

Shows that only words like tax, relief and death have 'frames', which

2. ✘ activate default values.

Holds that words are more than meanings and that they as 'regulators' of the implicit world-view, 'imply' actions and values - that is, they are

3. ✔ frames.

Holds that words may sound innocent but they carry associated values

4. ✘ and that is why language controls as well as communicates meaning.

Question Number : 55 Question Id : 7368155308 Question Type : MCQ Option Shuffling : Yes Display Question Number : Yes  
Single Line Question Option : No Option Orientation : Vertical

Correct : 1 Wrong : 0.25

The frame for the word 'lend' will assume a lender, a borrower and

Options :

1. ✘ A need and an object, evoking sympathy or a suitable feeling

An object or cash changing hands; the word will evoke unequal

2. ✔ relationships between the parties

An object, a need, a time frame for lending and repayment and changes

3. ✘ in relationship between the parties

4. ✘ An object, a record, and legal tangles will be the evoked thoughts

Question Number : 56 Question Id : 7368155309 Question Type : MCQ Option Shuffling : Yes Display Question Number : Yes  
Single Line Question Option : No Option Orientation : Vertical

Correct : 1 Wrong : 0.25

The synonym for the word 'ominous' as used here is

Options :

1. ✔ Worrying

2. ✘ Menacing

3. ✘ Gloomy

4. ✘ Unpromising

Question Number : 57 Question Id : 7368155310 Question Type : MCQ Option Shuffling : Yes Display Question Number : Yes  
Single Line Question Option : No Option Orientation : Vertical

Correct : 1 Wrong : 0.25

Identify the antonym of 'innocuous', keeping in mind the meaning it has here:

Options :

1. ✘ Offensive

2. ✘ Mischievous

3. ✘ Dangerous

4. ✔ Motivated

Question Number : 58 Question  
Single Line Question Option : N

Latest Sarkari Jobs, Govt Exam Results,  
Vacancies and updates on one click

Know More

lay Question Number : Yes

Correct : 1 Wrong : 0.25

Political catchphrases can sway us as

Options :

1. ✘ they are carefully spoken
2. ✘ they are carefully constructed
3. ✘ they are clearly constructed
4. ✔ they are cleverly constructed

Question Number : 59 Question Id : 7368155312 Question Type : MCQ Option Shuffling : Yes Display Question Number : Yes  
Single Line Question Option : No Option Orientation : Vertical

Correct : 1 Wrong : 0.25

'Tax relief' is not a neutral term as

Options :

1. ✘ a neutral term will have no identifiable frame to regulate our reactions
2. ✔ a neutral term will operate with no assumptions and expectations
3. ✘ a neutral term will be transparent about what is done and why
4. ✘ a neutral term will have no history or context behind it

Question Number : 60 Question Id : 7368155313 Question Type : MCQ Option Shuffling : Yes Display Question Number : Yes  
Single Line Question Option : No Option Orientation : Vertical

Correct : 1 Wrong : 0.25

In the phrase, 'using language effectively to define the issues', defining means

Options :

1. ✘ explaining the meaning of a word, phrase, etc.
2. ✘ showing or describing (someone or something) clearly and completely
3. ✘ showing the shape, outline, or edge of (something) very clearly
4. ✔ marking the boundaries of the related concept/object/action

Sub-Section Number:	2
Sub-Section Id:	736815157
Question Shuffling Allowed :	No

Question Id : 7368155314 Question Type : COMPREHENSION Sub Question Shuffling Allowed : No Group Comprehension Questions : No

Question Numbers : (61 to 70)

Question Label : Comprehension



Given below is a passage with ten blanks, numbered from 11 to 20. Fill in the blanks by choosing the correct option given against the corresponding Question number;

The spoken word is intimate, tied to the very breath and health of the speaker. The written word makes possible the autonomous survival of knowledge – with an oral \_\_\_\_\_ (11), the word disappears when the oralists have all been \_\_\_\_\_ (12); but, as people have noted for a long \_\_\_\_\_ (13), writing is impersonal, does not carry emotional \_\_\_\_\_ (14) as well as speech, and lacks the \_\_\_\_\_ (15) characteristics – pitch, tone, timbre, rate, etc. – that links speech to a \_\_\_\_\_ (16). Certainly, writing displays styles - some people insist they can \_\_\_\_\_ (17) any particular writer's writing - but it is also not as \_\_\_\_\_ (18) as speech. Even on the phone, we immediately know the \_\_\_\_\_ (19) of our loved ones. They are distinctive and \_\_\_\_\_ (20). Most civilizations recognized that writing had been introduced as a divine gift and clearly associated the origins of writing with the birth of their own civilizations.

#### Sub questions

Question Number : 61 Question Id : 7368155315 Question Type : MCQ Option Shuffling : Yes Display Question Number : Yes Single Line Question Option : No Option Orientation : Vertical

Correct : 1 Wrong : 0.25

Fill in the blanks by choosing the correct option given against the corresponding Question number;

#### Options :

1. ✘ word
2. ✘ culture
3. ✘ approach
4. ✔ tradition

Question Number : 62 Question Id : 7368155316 Question Type : MCQ Option Shuffling : Yes Display Question Number : Yes Single Line Question Option : No Option Orientation : Vertical

Correct : 1 Wrong : 0.25

Fill in the blanks by choosing the correct option given against the corresponding Question number;

#### Options :

1. ✔ killed
2. ✘ counted
3. ✘ invigorated
4. ✘ rewarded

Question Number : 63 Question Id : 7368155317 Question Type : MCQ Option Shuffling : Yes Display Question Number : Yes Single Line Question Option : No Option Orientation : Vertical

Correct : 1 Wrong : 0.25

Fill in the blanks by choosing the correct option given against the corresponding Question number;

#### Options :

- ✘ period
- ✘ duration
- ✘ stretch
- ✔ time

Question Number : 64 Question Id : 7368155318 Question Type : MCQ Option Shuffling : Yes Display Question Number : Yes  
Single Line Question Option : No Option Orientation : Vertical

Correct : 1 Wrong : 0.25

Fill in the blanks by choosing the correct option given against the corresponding Question number;

Options :

- ✘ insinuations
- ✘ implications
- ✘ instructions
- ✔ intonations

Question Number : 65 Question Id : 7368155319 Question Type : MCQ Option Shuffling : Yes Display Question Number : Yes  
Single Line Question Option : No Option Orientation : Vertical

Correct : 1 Wrong : 0.25

Fill in the blanks by choosing the correct option given against the corresponding Question number;

Options :

- ✘ identifying
- ✔ defining
- ✘ definite
- ✘ intricate

Question Number : 66 Question Id : 7368155320 Question Type : MCQ Option Shuffling : Yes Display Question Number : Yes  
Single Line Question Option : No Option Orientation : Vertical

Correct : 1 Wrong : 0.25

Fill in the blanks by choosing the correct option given against the corresponding Question number;

Options :

- ✘ writer
- ✘ scribe
- ✘ reorder
- ✔ speaker

Question Number : 67 Question Id : 7368155321 Question Type : MCQ Option Shuffling : Yes Display Question Number : Yes  
Single Line Question Option : No Option Orientation : Vertical

Correct : 1 Wrong : 0.25

Fill in the blanks by choosing the correct option given against the corresponding Question number;

Options :

- ✘ feel
- ✘ trace

3. ✘ hear

4. ✔ recognize

Question Number : 68 Question Id : 7368155322 Question Type : MCQ Option Shuffling : Yes Display Question Number : Yes  
Single Line Question Option : No Option Orientation : Vertical

Correct : 1 Wrong : 0.25

Fill in the blanks by choosing the correct option given against the corresponding Question number;

Options :

1. ✘ clear

2. ✘ known

3. ✔ distinctive

4. ✘ loving

Question Number : 69 Question Id : 7368155323 Question Type : MCQ Option Shuffling : Yes Display Question Number : Yes  
Single Line Question Option : No Option Orientation : Vertical

Correct : 1 Wrong : 0.25

Fill in the blanks by choosing the correct option given against the corresponding Question number;

Options :

1. ✘ smell

2. ✔ voices

3. ✘ looks

4. ✘ sights

Question Number : 70 Question Id : 7368155324 Question Type : MCQ Option Shuffling : Yes Display Question Number : Yes  
Single Line Question Option : No Option Orientation : Vertical

Correct : 1 Wrong : 0.25

Fill in the blanks by choosing the correct option given against the corresponding Question number;

Options :

1. ✘ common

2. ✔ unique

3. ✘ divisive

4. ✘ dilated

Question Id : 7368155314 Question Type : COMPREHENSION Sub Question Shuffling Allowed : No Group Comprehension  
Questions : No

Question Numbers : (61 to 70)

Question Label : Comprehension

Given below is a passage with ten blanks, numbered from 11 to 20. Fill in the blanks by choosing the correct option given against the corresponding Question number;

The spoken word is intimate, tied to the very breath and health of the speaker. The written word makes possible the autonomous survival of knowledge - with an oral \_\_\_\_\_ (11), the word disappears when the oralists have all been \_\_\_\_\_ (12); but, as people have noted for a long \_\_\_\_\_ (13), writing is impersonal, does not carry emotional \_\_\_\_\_ (14) as well as speech, and lacks the \_\_\_\_\_ (15) characteristics - pitch, tone, timbre, rate, etc. - that links speech to a \_\_\_\_\_ (16). Certainly, writing displays styles - some people insist they can \_\_\_\_\_ (17) any particular writer's writing - but it is also not as \_\_\_\_\_ (18) as speech. Even on the phone, we immediately know the \_\_\_\_\_ (19) of our loved ones. They are distinctive and \_\_\_\_\_ (20). Most civilizations recognized that writing had been introduced as a divine gift and clearly associated the origins of writing with the birth of their own civilizations.

Sub questions

Question Number : 61 Question Id : 7368155315 Question Type : MCQ Option Shuffling : Yes Display Question Number : Yes Single Line Question Option : No Option Orientation : Vertical

Correct : 1 Wrong : 0.25

Fill in the blanks by choosing the correct option given against the corresponding Question number;

Options :

1. ✘ word
2. ✘ culture
3. ✘ approach
4. ✔ tradition

Question Number : 62 Question Id : 7368155316 Question Type : MCQ Option Shuffling : Yes Display Question Number : Yes Single Line Question Option : No Option Orientation : Vertical

Correct : 1 Wrong : 0.25

Fill in the blanks by choosing the correct option given against the corresponding Question number;

Options :

1. ✔ killed

2. ✘ counted
3. ✘ invigorated
4. ✘ rewarded

Question Number : 63 Question Id : 7368155317 Question Type : MCQ Option Shuffling : Yes Display Question Number : Yes  
Single Line Question Option : No Option Orientation : Vertical

Correct : 1 Wrong : 0.25

Fill in the blanks by choosing the correct option given against the corresponding Question number;

Options :

1. ✘ period
2. ✘ duration
3. ✘ stretch
4. ✔ time

Question Number : 64 Question Id : 7368155318 Question Type : MCQ Option Shuffling : Yes Display Question Number : Yes  
Single Line Question Option : No Option Orientation : Vertical

Correct : 1 Wrong : 0.25

Fill in the blanks by choosing the correct option given against the corresponding Question number;

Options :

1. ✘ insinuations
2. ✘ implications
3. ✘ instructions
4. ✔ intonations

Question Number : 65 Question Id : 7368155319 Question Type : MCQ Option Shuffling : Yes Display Question Number : Yes  
Single Line Question Option : No Option Orientation : Vertical

Correct : 1 Wrong : 0.25

Fill in the blanks by choosing the correct option given against the corresponding Question number;

Options :

1. ✘ identifying
2. ✔ defining
3. ✘ definite
4. ✘ intricate

Question Number : 66 Question Id : 7368155320 Question Type : MCQ Option Shuffling : Yes Display Question Number : Yes  
Single Line Question Option : No Option Orientation : Vertical

Correct : 1 Wrong : 0.25

Fill in the blanks by choosing the correct option given against the corresponding Question number;

Options :

1. ✘ writer

2. ✘ scribe
3. ✘ reorder
4. ✔ speaker

Question Number : 67 Question Id : 7368155321 Question Type : MCQ Option Shuffling : Yes Display Question Number : Yes  
Single Line Question Option : No Option Orientation : Vertical

Correct : 1 Wrong : 0.25

Fill in the blanks by choosing the correct option given against the corresponding Question number;

Options :

1. ✘ feel
2. ✘ trace
3. ✘ hear
4. ✔ recognize

Question Number : 68 Question Id : 7368155322 Question Type : MCQ Option Shuffling : Yes Display Question Number : Yes  
Single Line Question Option : No Option Orientation : Vertical

Correct : 1 Wrong : 0.25

Fill in the blanks by choosing the correct option given against the corresponding Question number;

Options :

1. ✘ clear
2. ✘ known
3. ✔ distinctive
4. ✘ loving

Question Number : 69 Question Id : 7368155323 Question Type : MCQ Option Shuffling : Yes Display Question Number : Yes  
Single Line Question Option : No Option Orientation : Vertical

Correct : 1 Wrong : 0.25

Fill in the blanks by choosing the correct option given against the corresponding Question number;

Options :

1. ✘ smell
2. ✔ voices
3. ✘ looks
4. ✘ sights

Question Number : 70 Question Id : 7368155324 Question Type : MCQ Option Shuffling : Yes Display Question Number : Yes  
Single Line Question Option : No Option Orientation : Vertical

Correct : 1 Wrong : 0.25

Fill in the blanks by choosing the correct option given against the corresponding Question number;

Options :

1. ✘ common

- 2. ✓ unique
- 3. ✗ divisive
- 4. ✗ dilated

Sub-Section Number: 3  
Sub-Section Id: 736815158  
Question Shuffling Allowed : Yes

Question Number : 71 Question Id : 7368155325 Question Type : MCQ Option Shuffling : Yes Display Question Number : Yes  
Single Line Question Option : No Option Orientation : Vertical

Correct : 1 Wrong : 0.25

Given below is a set of five sentences, numbered 1 to 5, which are not in a meaningful order. Choose from the options given, the order which will be acceptable and meaningful :

- 1. Sonnets also generally contain a volta, or turn.
- 2. Writers have used various devices to indicate the turn as well as placing the turn in different places
- 3. Sonnet is a poem containing fourteen lines of iambic pentameter.
- 4. This is a subtle device is used to distract the reader from the monotonous beat of the iambic pentameter.
- 5. Traditionally, sonnets were classified into groups based on the rhyme scheme

Options :

- 1. ✗ 2,4,5,1,3
- 2. ✓ 3,5,1,4,2
- 3. ✗ 3,1,5,4,2
- 4. ✗ 3,5,1,2,4

Question Number : 71 Question Id : 7368155325 Question Type : MCQ Option Shuffling : Yes Display Question Number : Yes  
Single Line Question Option : No Option Orientation : Vertical

Correct : 1 Wrong : 0.25

Given below is a set of five sentences, numbered 1 to 5, which are not in a meaningful order. Choose from the options given, the order which will be acceptable and meaningful :

1. Sonnets also generally contain a volta, or turn.
2. Writers have used various devices to indicate the turn as well as placing the turn in different places
3. Sonnet is a poem containing fourteen lines of iambic pentameter.
4. This is a subtle device is used to distract the reader from the monotonous beat of the iambic pentameter.
5. Traditionally, sonnets were classified into groups based on the rhyme scheme

Options :

1. ✘ 2,4,5,1,3
2. ✔ 3,5,1,4,2
3. ✘ 3,1,5,4,2
4. ✘ 3,5,1,2,4

Question Number : 72 Question Id : 7368155326 Question Type : MCQ Option Shuffling : Yes Display Question Number : Yes Single Line Question Option : No Option Orientation : Vertical

Correct : 1 Wrong : 0.25

Given below is a set of five sentences, numbered 1 to 5, which are not in a meaningful order. Choose from the options given, the order which will be acceptable and meaningful :

1. It demonstrates our deep emotional connections with our world – past, present, and future.
2. It also allows us to visibly celebrate our deep emotional connections with our world.
3. Tears are a positive representation of who we are.
4. So go on and wear your tears with pride.
5. They are also scientifically proven to make you feel better.

Options :

1. ✘ 1,3,4,5,2
2. ✔ 3,1,2,5,4
3. ✘ 3,4,1,2,5
4. ✘ 3,4,2,1,5

Question Number : 72 Question Id : 7368155326 Question Type : MCQ Option Shuffling : Yes Display Question Number : Yes Single Line Question Option : No Option Orientation : Vertical

Correct : 1 Wrong : 0.25



Given below is a set of five sentences, numbered 1 to 5, which are not in a meaningful order. Choose from the options given, the order which will be acceptable and meaningful :

1. It demonstrates our deep emotional connections with our world - past, present, and future.
2. It also allows us to visibly celebrate our deep emotional connections with our world.
3. Tears are a positive representation of who we are.
4. So go on and wear your tears with pride.
5. They are also scientifically proven to make you feel better.

Options :

1. ✘ 1,3,4,5,2
2. ✔ 3,1,2,5,4
3. ✘ 3,4,1,2,5
4. ✘ 3,4,2,1,5

Question Number : 73 Question Id : 7368155327 Question Type : MCQ Option Shuffling : Yes Display Question Number : Yes Single Line Question Option : No Option Orientation : Vertical

Correct : 1 Wrong : 0.25

Given below is a set of five sentences, numbered 1 to 5, which are not in a meaningful order. Choose from the options given, the order which will be acceptable and meaningful :

1. Fuzzy logic is a form of many-valued logic in which the truth values of variables may be any real number between 0 and 1, considered to be "fuzzy".
2. Have you ever wondered why a multiple choice question is more difficult than a binary alternative [True-False!]?
3. Traditional logic relies on 'crisp', binary, values – zero or one.
4. Fuzzy logic has been extended to handle the concept of partial truth, where the truth value may range between completely true and completely false.
5. In 'crispy' logic, a typical rose is either red or not red and it cannot be red and not red and hence every sentence has the truth value 1 or 0.

Options :

1. ✘ 5,4,3,2,1
2. ✘ 2,5,1,4,3
3. ✔ 2,3,5,1,4
4. ✘ 1,2,3,4,5

Question Number : 73 Question Id : 7368155327 Question Type : MCO Option Shuffling : Yes Display Question Number : Yes Single Line Question Option : No

Correct : 1 Wrong : 0.25

Given below is a set of five sentences, numbered 1 to 5, which are not in a meaningful order. Choose from the options given, the order which will be acceptable and meaningful :

1. Fuzzy logic is a form of many-valued logic in which the truth values of variables may be any real number between 0 and 1, considered to be "fuzzy".
2. Have you ever wondered why a multiple choice question is more difficult than a binary alternative [True-False!]?
3. Traditional logic relies on 'crisp', binary, values - zero or one.
4. Fuzzy logic has been extended to handle the concept of partial truth, where the truth value may range between completely true and completely false.
5. In 'crispy' logic, a typical rose is either red or not red and it cannot be red and not red and hence every sentence has the truth value 1 or 0.

Options :

1. ✘ 5,4,3,2,1
2. ✘ 2,5,1,4,3
3. ✔ 2,3,5,1,4
4. ✘ 1,2,3,4,5

Question Number : 74 Question Id : 7368155328 Question Type : MCQ Option Shuffling : Yes Display Question Number : Yes Single Line Question Option : No Option Orientation : Vertical

Correct : 1 Wrong : 0.25

Given below is a sentence/famous saying, the words/segments of which have been jumbled up and numbered. Choose the right order of the words/segments from the given options:

**no friend / there is /as/ a book/ as loyal**

1            2            3            4            5

Options :

1. ✘ 2,5,1,3,4
2. ✘ 2,1,5,4,3
3. ✔ 2,1,5,3,4
4. ✘ 2,3,4,5,1

Question Number : 74 Question Id : 7368155328 Question Type : MCQ Option Shuffling : Yes Display Question Number : Yes Single Line Question Option : No

Correct : 1 Wrong : 0.25

Given below is a sentence/famous saying, the words/segments of which have been jumbled up and numbered. Choose the right order of the words/segments from the given options:

no friend / there is /as/ a book/ as loyal

1                      2                      3                      4                      5

Options :

1. ✘ 2,5,1,3,4
2. ✘ 2,1,5,4,3
3. ✔ 2,1,5,3,4
4. ✘ 2,3,4,5,1

Question Number : 75 Question Id : 7368155329 Question Type : MCQ Option Shuffling : Yes Display Question Number : Yes  
Single Line Question Option : No Option Orientation : Vertical

Correct : 1 Wrong : 0.25

Given below is a sentence/famous saying, the words/segments of which have been jumbled up and numbered. Choose the right order of the words/segments from the given options:

no knowledge / but/ all knowledge/ kills/ hurts

1                      2                      3                      4                      5

Options :

1. ✘ 2,3,4,5,1
2. ✔ 3,5,2,1,4
3. ✘ 3,2,5,1,4
4. ✘ 1,5,2,3,4

Question Number : 75 Question Id : 7368155329 Question Type : MCQ Option Shuffling : Yes Display Question Number : Yes  
Single Line Question Option : No Option Orientation : Vertical

Correct : 1 Wrong : 0.25

Given below is a sentence/famous saying, the words/segments of which have been jumbled up and numbered. Choose the right order of the words/segments from the given options:

no knowledge / but/ all knowledge/ kills/ hurts

1                      2                      3                      4                      5

Options :

1. ✘ 2,3,4,5,1
2. ✔ 3,5,2,1,4

3. ✘ 3,2,5,1,4

4. ✘ 1,5,2,3,4

Question Number : 76 Question Id : 7368155330 Question Type : MCQ Option Shuffling : Yes Display Question Number : Yes  
Single Line Question Option : No Option Orientation : Vertical

Correct : 1 Wrong : 0.25

Given below is an ungrammatical, defective, sentence and there are 4 options given. One of them is the correct and improved form of the sentence. Choose the one which improves the given sentence:

**Journey of thousand miles begins with single step.**

Options :

1. ✘ The journey of a thousand miles begins with single step.

2. ✘ Journey of a thousand miles begins with a single step.

3. ✔ The journey of a thousand miles begins with a single step.

4. ✘ The journey of thousand miles begins with a single

Question Number : 76 Question Id : 7368155330 Question Type : MCQ Option Shuffling : Yes Display Question Number : Yes  
Single Line Question Option : No Option Orientation : Vertical

Correct : 1 Wrong : 0.25

Given below is an ungrammatical, defective, sentence and there are 4 options given. One of them is the correct and improved form of the sentence. Choose the one which improves the given sentence:

**Journey of thousand miles begins with single step.**

Options :

1. ✘ The journey of a thousand miles begins with single step.

2. ✘ Journey of a thousand miles begins with a single step.

3. ✔ The journey of a thousand miles begins with a single step.

4. ✘ The journey of thousand miles begins with a single

Question Number : 77 Question Id : 7368155331 Question Type : MCQ Option Shuffling : Yes Display Question Number : Yes  
Single Line Question Option : No Option Orientation : Vertical

Correct : 1 Wrong : 0.25

Given below is an ungrammatical, defective, sentence and there are 4 options given. One of them is the correct and improved form of the sentence. Choose the one which improves the given sentence:

**Sometime questions are complicated and answers are simple.**

Options :

1. ✘ Sometimes the questions are complicated and answers are simple.

2. ✘ Sometimes questions are complicated and answers are simple.

3. ✘ Sometime the que

4. ✓ Sometimes the questions are complicated and the answers are simple

Question Number : 77 Question Id : 7368155331 Question Type : MCQ Option Shuffling : Yes Display Question Number : Yes  
Single Line Question Option : No Option Orientation : Vertical

Correct : 1 Wrong : 0.25

Given below is an ungrammatical, defective, sentence and there are 4 options given. One of them is the correct and improved form of the sentence. Choose the one which improves the given sentence:

**Sometime questions are complicated and answers are simple.**

Options :

1. ✗ Sometimes the questions are complicated and answers are simple.
2. ✗ Sometimes questions are complicated and answers are simple.
3. ✗ Sometime the questions are complicated and the answers are simple.
4. ✓ Sometimes the questions are complicated and the answers are simple

Question Number : 78 Question Id : 7368155332 Question Type : MCQ Option Shuffling : Yes Display Question Number : Yes  
Single Line Question Option : No Option Orientation : Vertical

Correct : 1 Wrong : 0.25

Given below is an ungrammatical, defective, sentence and there are 4 options given. One of them is the correct and improved form of the sentence. Choose the one which improves the given sentence:

**If I have seen farther it is by standing on the shoulder of Giants.**

Options :

1. ✗ If I have seen farther it is by standing on the shoulders of Giants.
2. ✓ If I have seen further it is by standing on the shoulders of Giants.
3. ✗ If I have seen further it is by standing on the shoulder of Giants.
4. ✗ If I have seen further it is bye standing on the shoulders of Giants

Question Number : 78 Question Id : 7368155332 Question Type : MCQ Option Shuffling : Yes Display Question Number : Yes  
Single Line Question Option : No Option Orientation : Vertical

Correct : 1 Wrong : 0.25

Given below is an ungrammatical, defective, sentence and there are 4 options given. One of them is the correct and improved form of the sentence. Choose the one which improves the given sentence:

**If I have seen farther it is bye standing on the shoulder of Giants.**

Options :

1. ✗ If I have seen farther it is by standing on the shoulders of Giants.

2. ✓ If I have seen further it is by standing on the shoulders of Giants.
3. ✗ If I have seen further it is by standing on the shoulder of Giants.
4. ✗ If I have seen further it is bye standing on the shoulders of Giants

Question Number : 79 Question Id : 7368155333 Question Type : MCQ Option Shuffling : Yes Display Question Number : Yes  
Single Line Question Option : No Option Orientation : Vertical

Correct : 1 Wrong : 0.25

Given below is an ungrammatical, defective, sentence and there are 4 options given. One of them is the correct and improved form of the sentence. Choose the one which improves the given sentence:

**Lifes under any obligation to give we what we except.**

Options :

1. ✗ Life's under no obligation to give us what we except.
2. ✓ Life's under no obligation to give us what we expect.
3. ✗ Life's under any obligation to give us what we expect.
4. ✗ Life's under no obligation to give us what we expect

Question Number : 79 Question Id : 7368155333 Question Type : MCQ Option Shuffling : Yes Display Question Number : Yes  
Single Line Question Option : No Option Orientation : Vertical

Correct : 1 Wrong : 0.25

Given below is an ungrammatical, defective, sentence and there are 4 options given. One of them is the correct and improved form of the sentence. Choose the one which improves the given sentence:

**Lifes under any obligation to give we what we except.**

Options :

1. ✗ Life's under no obligation to give us what we except.
2. ✓ Life's under no obligation to give us what we expect.
3. ✗ Life's under any obligation to give us what we expect.
4. ✗ Lifes under no obligation to give us what we expect

Question Number : 80 Question Id : 7368155334 Question Type : MCQ Option Shuffling : Yes Display Question Number : Yes  
Single Line Question Option : No Option Orientation : Vertical

Correct : 1 Wrong : 0.25

Given below is an ungrammatical, defective, sentence and there are 4 options given. One of them is the correct and improved form of the sentence. Choose the one which improves the given sentence:

**Only dead has seen end of war.**

Options :

1. ✓ Only the dead hav

Latest Sarkari Jobs, Govt Exam Results,  
Vacancies and updates on one click

Know More

2. ✘ Only the dead have seen end of war,
3. ✘ Only dead have seen the end of war.
4. ✘ Only the dead has seen the end of war

Question Number : 80 Question Id : 7368155334 Question Type : MCQ Option Shuffling : Yes Display Question Number : Yes  
Single Line Question Option : No Option Orientation : Vertical

Correct : 1 Wrong : 0.25

Given below is an ungrammatical, defective, sentence and there are 4 options given. One of them is the correct and improved form of the sentence. Choose the one which improves the given sentence:

**Only dead has seen end of war.**

Options :

1. ✔ Only the dead have seen the end of war.
2. ✘ Only the dead have seen end of war,
3. ✘ Only dead have seen the end of war.
4. ✘ Only the dead has seen the end of war

Question Number : 81 Question Id : 7368155335 Question Type : MCQ Option Shuffling : Yes Display Question Number : Yes  
Single Line Question Option : No Option Orientation : Vertical

Correct : 1 Wrong : 0.25

Given below is a sentence which is to be transformed and rewritten as indicated in brackets and there are four options given. Choose the one which 'correctly' transforms the given sentence :

**The local police inspector has been taking them to the headquarters regularly. {into the passive voice form}**

Options :

1. ✔ They have been being taken regularly to the headquarters by the local police inspector.
2. ✘ They are being taken regularly to the headquarters by the local police inspector.
3. ✘ They have been taken regularly to the headquarters by the local police inspector.
4. ✘ They have being taken regularly to the headquarters by the local police inspector

Question Number : 81 Question Id : 7368155335 Question Type : MCQ Option Shuffling : Yes Display Question Number : Yes  
Single Line Question Option : No Option Orientation : Vertical

Correct : 1 Wrong : 0.25

Given below is a sentence which is to be transformed and rewritten as indicated in brackets and there are four options given. Choose the one which 'correctly' transforms the given sentence :

**The local police inspector has been taking them to the headquarters regularly. {into the passive voice form}**

Options :

1. ✓ They have been being taken regularly to the headquarters by the local police inspector.
2. ✗ They are being taken regularly to the headquarters by the local police inspector.
3. ✗ They have been taken regularly to the headquarters by the local police inspector.
4. ✗ They have being taken regularly to the headquarters by the local police inspector

Question Number : 82 Question Id : 7368155336 Question Type : MCQ Option Shuffling : Yes Display Question Number : Yes Single Line Question Option : No Option Orientation : Vertical

Correct : 1 Wrong : 0.25

Given below is a sentence which is to be transformed and rewritten as indicated in brackets and there are four options given. Choose the one which 'correctly' transforms the given sentence :

**She replied with tears in her eyes, "What a stupid fellow have I been loving!" {Report this}**

Options :

1. ✗ She said that she has been loving an extremely stupid fellow.  
She exclaimed that she has been loving a fellow who is more stupid than she had
2. ✗ conceived.
3. ✓ She lamented the fact that she has been loving an extremely stupid fellow.
4. ✗ She regretted the fact that she has been loving a stupid fellow, by way of replying

Question Number : 82 Question Id : 7368155336 Question Type : MCQ Option Shuffling : Yes Display Question Number : Yes Single Line Question Option : No Option Orientation : Vertical

Correct : 1 Wrong : 0.25



Given below is a sentence which is to be transformed and rewritten as indicated in brackets and there are four options given. Choose the one which 'correctly' transforms the given sentence :

**She replied with tears in her eyes, "What a stupid fellow have I been loving!" {Report this}**

Options :

1. ✘ She said that she has been loving an extremely stupid fellow.  
She exclaimed that she has been loving a fellow who is more stupid than she had conceived.
2. ✘ She lamented the fact that she has been loving an extremely stupid fellow.
3. ✔ She regretted the fact that she has been loving a stupid fellow, by way of replying
4. ✘

Question Number : 83 Question Id : 7368155337 Question Type : MCQ Option Shuffling : Yes Display Question Number : Yes Single Line Question Option : No Option Orientation : Vertical

Correct : 1 Wrong : 0.25

Given below is a sentence which is to be transformed and rewritten as indicated in brackets and there are four options given. Choose the one which 'correctly' transforms the given sentence :

**He ran fast. He missed the train. {Rewrite as a complex sentence}**

Options :

1. ✘ Running fast, he missed the train.
2. ✘ He ran fast, yet he missed the train.
3. ✔ Though he ran fast, he missed the train.
4. ✘ Even though he ran fast, he could not catch the train

Question Number : 83 Question Id : 7368155337 Question Type : MCQ Option Shuffling : Yes Display Question Number : Yes Single Line Question Option : No Option Orientation : Vertical

Correct : 1 Wrong : 0.25

Given below is a sentence which is to be transformed and rewritten as indicated in brackets and there are four options given. Choose the one which 'correctly' transforms the given sentence :

**He ran fast. He missed the train. {Rewrite as a complex sentence}**

Options :

1. ✘ Running fast, h

2. ✘ He ran fast, yet he missed the train.
3. ✔ Though he ran fast, he missed the train.
4. ✘ Even though he ran fast, he could not catch the train

Question Number : 84 Question Id : 7368155338 Question Type : MCQ Option Shuffling : Yes Display Question Number : Yes  
Single Line Question Option : No Option Orientation : Vertical

Correct : 1 Wrong : 0.25

Read the sentence given below. Pay attention to the words/phrases/segments in italics.  
Choose the appropriate ONE WORD substitutes for the phrases and clauses italicized:

**That shopkeeper took back the L-size tops and gave me an XL and also took back his personal comments.**

Options :

1. ✔ The shopkeeper exchanged the L-size tops for an XL and admitted his comments were inappropriate and took them back.
2. ✘ The shopkeeper took back the L-size top and gave an XL one in exchange and apologized for his personal comments.
3. ✘ The shopkeeper gave an XL-size tops for the L-size and admitted that he was wrong to have made personal comments earlier.
4. ✘ I made the shopkeeper exchange my tops and apologize for being rude

Question Number : 84 Question Id : 7368155338 Question Type : MCQ Option Shuffling : Yes Display Question Number : Yes  
Single Line Question Option : No Option Orientation : Vertical

Correct : 1 Wrong : 0.25

Read the sentence given below. Pay attention to the words/phrases/segments in italics. Choose the appropriate ONE WORD substitutes for the phrases and clauses italicized:

**That shopkeeper took back the L-size tops and gave me an XL and also took back his personal comments.**

Options :

1. ✔ The shopkeeper exchanged the L-size tops for an XL and admitted his comments were inappropriate and took them back.
2. ✘ The shopkeeper took back the L-size top and gave an XL one in exchange and apologized for his personal comments.
3. ✘ The shopkeeper gave an XL-size tops for the L-size and admitted that he was wrong to have made personal comments earlier.
4. ✘ I made the shopkeeper exchange my tops and apologize for being rude

Correct : 1 Wrong : 0.25

Read the sentence given below. Pay attention to the words/phrases/segments in italics. Choose the appropriate ONE WORD substitutes for the phrases and clauses italicized:

**She recently took up yoga as a hobby and it has taken up most of her free time**

Options :

1. ✘ Recently she adopted yoga as a hobby and it has adopted most of her free time.
2. ✘ Recently she occupied most of her free time with yoga.
3. ✔ Recently she adopted yoga as a hobby and it has occupied most of her free time.
4. ✘ Her new hobby, yoga, adopted recently, has occupied most of her free time

Question Number : 85 Question Id : 7368155339 Question Type : MCQ Option Shuffling : Yes Display Question Number : Yes Single Line Question Option : No Option Orientation : Vertical

Correct : 1 Wrong : 0.25

Read the sentence given below. Pay attention to the words/phrases/segments in italics. Choose the appropriate ONE WORD substitutes for the phrases and clauses italicized:

**She recently took up yoga as a hobby and it has taken up most of her free time**

Options :

1. ✘ Recently she adopted yoga as a hobby and it has adopted most of her free time.
2. ✘ Recently she occupied most of her free time with yoga.
3. ✔ Recently she adopted yoga as a hobby and it has occupied most of her free time.
4. ✘ Her new hobby, yoga, adopted recently, has occupied most of her free time

Question Number : 86 Question Id : 7368155340 Question Type : MCQ Option Shuffling : Yes Display Question Number : Yes Single Line Question Option : No Option Orientation : Vertical

Correct : 1 Wrong : 0.25

Given below is a sentence which divided into four parts labelled a, b, c, and d. One of these parts contains an error. Choose the part that has the error:

**As long as / one pursues / ones dream, / one will not become old.**

**A B C D**

Options :

1. ✘ A
2. ✘ B
3. ✔ C

4. ✘ D

Question Number : 86 Question Id : 7368155340 Question Type : MCQ Option Shuffling : Yes Display Question Number : Yes  
Single Line Question Option : No Option Orientation : Vertical

Correct : 1 Wrong : 0.25

Given below is a sentence which divided into four parts labelled a, b, c, and d. One of these parts contains an error. Choose the part that has the error:

As long as/ one pursues / ones dream, / one will not become old.

A

B

C

D

Options :

1. ✘ A

2. ✘ B

3. ✔ C

4. ✘ D

Question Number : 87 Question Id : 7368155341 Question Type : MCQ Option Shuffling : Yes Display Question Number : Yes  
Single Line Question Option : No Option Orientation : Vertical

Correct : 1 Wrong : 0.25

Given below is a sentence which divided into four parts labelled a, b, c, and d. One of these parts contains an error. Choose the part that has the error:

A sure-fire formula / for failure/ is trying to please / anybody.

A

B

C

D

Options :

1. ✘ A

2. ✘ B

3. ✘ C

4. ✔ D

Question Number : 87 Question Id : 7368155341 Question Type : MCQ Option Shuffling : Yes Display Question Number : Yes  
Single Line Question Option : No Option Orientation : Vertical

Correct : 1 Wrong : 0.25

Given below is a sentence which divided into four parts labelled a, b, c, and d. One of these parts contains an error. Choose the part that has the error:

A sure-fire formula / for failure/ is trying to please / anybody.

A

B

C

D

Options :

Latest Sarkari Jobs, Govt Exam Results,  
Vacancies and updates on one click

Know More

- 1. ✘ A
- 2. ✘ B
- 3. ✘ C
- 4. ✔ D

Question Number : 88 Question Id : 7368155342 Question Type : MCQ Option Shuffling : Yes Display Question Number : Yes  
Single Line Question Option : No Option Orientation : Vertical  
Correct : 1 Wrong : 0.25

Given below is a sentence which divided into four parts labelled a, b, c, and d. One of these parts contains an error. Choose the part that has the error:

**We called for you / last night / but /you weren't home.**

**A B C D**

Options :

- 1. ✔ A
- 2. ✘ B
- 3. ✘ C
- 4. ✘ D

Question Number : 88 Question Id : 7368155342 Question Type : MCQ Option Shuffling : Yes Display Question Number : Yes  
Single Line Question Option : No Option Orientation : Vertical  
Correct : 1 Wrong : 0.25

Given below is a sentence which divided into four parts labelled a, b, c, and d. One of these parts contains an error. Choose the part that has the error:

**We called for you / last night / but /you weren't home.**

**A B C D**

Options :

- 1. ✔ A
- 2. ✘ B
- 3. ✘ C
- 4. ✘ D

Question Number : 89 Question Id : 7368155343 Question Type : MCQ Option Shuffling : Yes Display Question Number : Yes  
Single Line Question Option : No Option Orientation : Vertical  
Correct : 1 Wrong : 0.25

Fill in the blanks with the correct form of idioms /proverbs by choosing the correct option given.

**Our teacher \_\_\_\_\_ the final project \_\_\_\_\_ three separate parts.**

Options :

- 1. ✘ break; into

Latest Sarkari Jobs, Govt Exam Results, Vacancies and updates on one click [Know More](#)

2. ✓ broke; into
3. ✗ broke; down
4. ✗ break; down

Question Number : 89 Question Id : 7368155343 Question Type : MCQ Option Shuffling : Yes Display Question Number : Yes  
Single Line Question Option : No Option Orientation : Vertical

Correct : 1 Wrong : 0.25

Fill in the blanks with the correct form of idioms /proverbs by choosing the correct option given.

Our teacher \_\_\_\_\_ the final project \_\_\_\_\_ three separate parts.

Options :

1. ✗ break; into
2. ✓ broke; into
3. ✗ broke; down
4. ✗ break; down

Question Number : 90 Question Id : 7368155344 Question Type : MCQ Option Shuffling : Yes Display Question Number : Yes  
Single Line Question Option : No Option Orientation : Vertical

Correct : 1 Wrong : 0.25

Fill in the blanks with the correct form of idioms /proverbs by choosing the correct option given.

We \_\_\_\_\_ of those pushy neighbours.

Options :

1. ✗ Are glad to see the front
2. ✗ Were happy to see the front
3. ✓ were glad to see the back
4. ✗ are happy to see the front

Question Number : 90 Question Id : 7368155344 Question Type : MCQ Option Shuffling : Yes Display Question Number : Yes  
Single Line Question Option : No Option Orientation : Vertical

Correct : 1 Wrong : 0.25

Fill in the blanks with the correct form of idioms /proverbs by choosing the correct option given.

We \_\_\_\_\_ of those pushy neighbours.

Options :

1. ✗ Are glad to see the front
2. ✗ Were happy to

3. ✓ were glad to see the back  
4. ✗ are happy to see the front

Question Number : 91 Question Id : 7368155345 Question Type : MCQ Option Shuffling : Yes Display Question Number : Yes  
Single Line Question Option : No Option Orientation : Vertical

Correct : 1 Wrong : 0.25

Complete the sentence below by choosing one related pair of words that will fill in the blanks:

You made your \_\_\_\_\_, now you must \_\_\_\_\_ in it.

Options :

1. ✗ soup; swim  
2. ✗ room; sleep  
3. ✓ bed; lie  
4. ✗ cot; lay

Question Number : 91 Question Id : 7368155345 Question Type : MCQ Option Shuffling : Yes Display Question Number : Yes  
Single Line Question Option : No Option Orientation : Vertical

Correct : 1 Wrong : 0.25

Complete the sentence below by choosing one related pair of words that will fill in the blanks:

You made your \_\_\_\_\_, now you must \_\_\_\_\_ in it.

Options :

1. ✗ soup; swim  
2. ✗ room; sleep  
3. ✓ bed; lie  
4. ✗ cot; lay

Question Number : 92 Question Id : 7368155346 Question Type : MCQ Option Shuffling : Yes Display Question Number : Yes  
Single Line Question Option : No Option Orientation : Vertical

Correct : 1 Wrong : 0.25

Complete the sentence below by choosing one related pair of words that will fill in the blanks:

One man's \_\_\_\_\_ is another man's \_\_\_\_\_,

Options :

1. ✗ fish; caviar  
2. ✗ lamb; steak  
3. ✓ meat; poison  
4. ✗ bread; porridge

Question Number : 92 Question Id : 7368155346 Question Type : MCQ Option Shuffling : Yes Display Question Number : Yes  
Single Line Question Option : No Option Orientation : Vertical

Correct : 1 Wrong : 0.25

Complete the sentence below by choosing one related pair of words that will fill in the blanks:

One man's \_\_\_\_\_ is another man's \_\_\_\_\_,

Options :

1. ✘ fish; caviar
2. ✘ lamb; steak
3. ✔ meat; poison
4. ✘ bread; porridge

Question Number : 93 Question Id : 7368155347 Question Type : MCQ Option Shuffling : Yes Display Question Number : Yes  
Single Line Question Option : No Option Orientation : Vertical

Correct : 1 Wrong : 0.25

A key word is given below. Choose the word closest to it in its meaning {synonym}. Pay attention to how the word would be used to, if required:

*Decide (Verb )*

Options :

1. ✘ Settle
2. ✘ Fixed
3. ✔ Determine
4. ✘ Elect

Question Number : 93 Question Id : 7368155347 Question Type : MCQ Option Shuffling : Yes Display Question Number : Yes  
Single Line Question Option : No Option Orientation : Vertical

Correct : 1 Wrong : 0.25

A key word is given below. Choose the word closest to it in its meaning {synonym}. Pay attention to how the word would be used to, if required:

*Decide (Verb )*

Options :

1. ✘ Settle
2. ✘ Fixed
3. ✔ Determine
4. ✘ Elect

Question Number : 94 Question Id : 7368155348 Question Type : MCQ Option Shuffling : Yes Display Question Number : Yes  
Single Line Question Option : No Option Orientation : Vertical

Correct : 1 Wrong : 0.25



A key word is given below. Choose the word closest to it in its meaning {synonym}. Pay attention to how the word would be used to, if required:

*Imperfect*

Options :

1. ✘ Partial
2. ✘ Faulty
3. ✘ Incomplete
4. ✔ Deficient

Question Number : 94 Question Id : 7368155348 Question Type : MCQ Option Shuffling : Yes Display Question Number : Yes  
Single Line Question Option : No Option Orientation : Vertical

Correct : 1 Wrong : 0.25

A key word is given below. Choose the word closest to it in its meaning {synonym}. Pay attention to how the word would be used to, if required:

*Imperfect*

Options :

1. ✘ Partial
2. ✘ Faulty
3. ✘ Incomplete
4. ✔ Deficient

Question Number : 95 Question Id : 7368155349 Question Type : MCQ Option Shuffling : Yes Display Question Number : Yes  
Single Line Question Option : No Option Orientation : Vertical

Correct : 1 Wrong : 0.25

A key word is given below. Choose the word closest to it in its meaning {synonym}. Pay attention to how the word would be used to, if required:

*Dread*

Options :

1. ✘ Anxiety
2. ✘ Horror
3. ✔ Fear
4. ✘ Alarm

Question Number : 95 Question Id : 7368155349 Question Type : MCQ Option Shuffling : Yes Display Question Number : Yes  
Single Line Question Option : No Option Orientation : Vertical

Correct : 1 Wrong : 0.25

A key word is given below. Choose the word closest to it in its meaning {synonym}. Pay attention to how the word would be used to, if required:

***Dread***

Options :

1. ❌ Anxiety
2. ❌ Horror
3. ✅ Fear
4. ❌ Alarm

Question Number : 96 Question Id : 7368155350 Question Type : MCQ Option Shuffling : Yes Display Question Number : Yes  
Single Line Question Option : No Option Orientation : Vertical

Correct : 1 Wrong : 0.25

A key word is given below. Choose the word which indicates the contradictory or opposite meaning {antonym} of the key word:

***Respect [verb]***

Options :

1. ✅ Contempt
2. ❌ Disregard
3. ❌ Disown
4. ❌ Ignore

Question Number : 96 Question Id : 7368155350 Question Type : MCQ Option Shuffling : Yes Display Question Number : Yes  
Single Line Question Option : No Option Orientation : Vertical

Correct : 1 Wrong : 0.25

A key word is given below. Choose the word which indicates the contradictory or opposite meaning {antonym} of the key word:

***Respect [verb]***

Options :

1. ✅ Contempt
2. ❌ Disregard
3. ❌ Disown
4. ❌ Ignore

Question Number : 97 Question Id : 7368155351 Question Type : MCQ Option Shuffling : Yes Display Question Number : Yes  
Single Line Question Option : No Option Orientation : Vertical

Correct : 1 Wrong : 0.25

A key word is given below. Choose the word which indicates the contradictory or opposite meaning {antonym} of the key word:

*Sacred*

Options :

1. ✓ Profane
2. ✗ Irreligious
3. ✗ Earthly
4. ✗ Lay

Question Number : 97 Question Id : 7368155351 Question Type : MCQ Option Shuffling : Yes Display Question Number : Yes  
Single Line Question Option : No Option Orientation : Vertical

Correct : 1 Wrong : 0.25

A key word is given below. Choose the word which indicates the contradictory or opposite meaning {antonym} of the key word:

*Sacred*

Options :

1. ✓ Profane
2. ✗ Irreligious
3. ✗ Earthly
4. ✗ Lay

Question Number : 98 Question Id : 7368155352 Question Type : MCQ Option Shuffling : Yes Display Question Number : Yes  
Single Line Question Option : No Option Orientation : Vertical

Correct : 1 Wrong : 0.25

Given below is a set of four words. One of the four words is spelled wrongly. Choose the word that has been spelled wrongly.

Options :

1. ✗ handwrite
2. ✗ typewrite
3. ✗ underwrite
4. ✓ playwrite

Question Number : 98 Question Id : 7368155352 Question Type : MCQ Option Shuffling : Yes Display Question Number : Yes  
Single Line Question Option : No Option Orientation : Vertical

Correct : 1 Wrong : 0.25

Given below is a set of four words. One of the four words is spelled wrongly. Choose the word that has been spelled wrongly.

Options :

1. ✗ handwrite

2. ✘ typewrite
3. ✘ underwrite
4. ✔ playwrite

Question Number : 99 Question Id : 7368155353 Question Type : MCQ Option Shuffling : Yes Display Question Number : Yes  
Single Line Question Option : No Option Orientation : Vertical

Correct : 1 Wrong : 0.25

Given below is a set of four words. One of the four words is spelled wrongly. Choose the word that has been spelled wrongly.

Options :

1. ✘ exceed
2. ✘ proceed
3. ✘ succeed
4. ✔ receed

Question Number : 99 Question Id : 7368155353 Question Type : MCQ Option Shuffling : Yes Display Question Number : Yes  
Single Line Question Option : No Option Orientation : Vertical

Correct : 1 Wrong : 0.25

Given below is a set of four words. One of the four words is spelled wrongly. Choose the word that has been spelled wrongly.

Options :

1. ✘ exceed
2. ✘ proceed
3. ✘ succeed
4. ✔ receed

Question Number : 100 Question Id : 7368155354 Question Type : MCQ Option Shuffling : Yes Display Question Number : Yes  
Single Line Question Option : No Option Orientation : Vertical

Correct : 1 Wrong : 0.25

Given below is a set of four words. Choose the word with the correct spelling:

Options :

1. ✘ abruptt
2. ✘ bankruptt
3. ✔ corrupt
4. ✘ dissruprt

Question Number : 100 Question Id : 7368155354 Question Type : MCQ Option Shuffling : Yes Display Question Number : Yes  
Single Line Question Option : No Option Orientation : Vertical

Correct : 1 Wrong : 0.25

Given below is a set of four words. Choose the word with the correct spelling:

Options :

1. ✘ abruptt
2. ✘ bankruptt
3. ✔ corrupt
4. ✘ dissruppt

### General Intelligence

Section Id :	736815105
Section Number :	3
Section type :	Online
Mandatory or Optional:	Mandatory
Number of Questions:	50
Number of Questions to be attempted:	50
Section Marks:	50
Display Number Panel:	Yes
Group All Questions:	No

Sub-Section Number:	1
Sub-Section Id:	736815159
Question Shuffling Allowed :	Yes

Question Number : 101 Question Id : 7368155355 Question Type : MCQ Option Shuffling : Yes Display Question Number : Yes  
Single Line Question Option : No Option Orientation : Vertical

Correct : 1 Wrong : 0.25

If 5 men can do a work in 12 days. How many men will be required to do the same work in 6 days?

Options :

1. ✘ 4 men
2. ✘ 6 men
3. ✔ 10 men
4. ✘ 12 men

Question Number : 101 Question Id : 7368155355 Question Type : MCQ Option Shuffling : Yes Display Question Number : Yes  
Single Line Question Option : No Option Orientation : Vertical

Correct : 1 Wrong : 0.25

यदि 5 पुरुष एक काम को 12 दिन में करते हैं। तो 6 दिन में उसी काम को करने के लिए कितने पुरुषों की आवश्यकता होगी?

Options :

1. ✘ 4 पुरुष
2. ✘ 6 पुरुष
3. ✔ 10 पुरुष

## 4. ✖ 12 पुरुष

Question Number : 102 Question Id : 7368155356 Question Type : MCQ Option Shuffling : Yes Display Question Number : Yes  
Single Line Question Option : No Option Orientation : Vertical

Correct : 1 Wrong : 0.25

Arnab left his job and started his own business. He might have taken such a decision because :

Options :

1. ✖ He was doing the job for free
2. ✖ His parents were business minded
3. ✖ He belonged to minority
4. ✔ He wanted something of his own

Question Number : 102 Question Id : 7368155356 Question Type : MCQ Option Shuffling : Yes Display Question Number : Yes  
Single Line Question Option : No Option Orientation : Vertical

Correct : 1 Wrong : 0.25

अर्नब ने अपनी नौकरी छोड़कर अपना व्यापार शुरू किया। उसने ऐसा निर्णय इसलिये लिया होगा क्योंकि

Options :

1. ✖ वह मुफ्त में नौकरी कर रहा होगा
2. ✖ उसके माता-पिता व्यापार में रुचि रखने वाले होंगे
3. ✖ वह अल्पसंख्यक होगा
4. ✔ वह स्वयं कुछ करना चाहता होगा

Question Number : 103 Question Id : 7368155357 Question Type : MCQ Option Shuffling : Yes Display Question Number : Yes  
Single Line Question Option : No Option Orientation : Vertical

Correct : 1 Wrong : 0.25

Shubham is a vegetable vendor. He then started delivering vegetables online. Which of the following situations led him to take such a decision?

Options :

1. ✖ The society does not buys vegetables from shops now-a-days
2. ✖ The society does not eats food
3. ✖ Shubham is not interested in selling vegetables
4. ✔ Selling vegetables online is earning him a good profit

Question Number : 103 Question Id : 7368155357 Question Type : MCQ Option Shuffling : Yes Display Question Number : Yes  
Single Line Question Option : No Option Orientation : Vertical

Correct : 1 Wrong : 0.25

शुभम सब्जियों का विक्रेता है। उसने सब्जियों को ऑनलाइन बेचना प्रारंभ किया।

निम्नलिखित में से उस

Options :

1. ✘ आज कल समाज के लोग सब्जियों को दुकानों से नहीं खरीदते
2. ✘ समाज के लोग खाना नहीं खाते
3. ✘ शुभम की सब्जियों को बेचने में दिलचस्पी नहीं रही
4. ✔ सब्जियों को ऑनलाइन बेचने से उसे अच्छा मुनाफा हो रहा है

Question Number : 104 Question Id : 7368155358 Question Type : MCQ Option Shuffling : Yes Display Question Number : Yes  
Single Line Question Option : No Option Orientation : Vertical

Correct : 1 Wrong : 0.25

To cover a distance of 450 km in 15 hours how much speed is required?

Options :

1. ✘ 35 kmph
2. ✘ 45 kmph
3. ✘ 78 kmph
4. ✔ 30 kmph

Question Number : 104 Question Id : 7368155358 Question Type : MCQ Option Shuffling : Yes Display Question Number : Yes  
Single Line Question Option : No Option Orientation : Vertical

Correct : 1 Wrong : 0.25

450 किलोमीटर की दूरी को 15 घंटों में तय करने के लिए कितनी गति की आवश्यकता है?

Options :

1. ✘ 35 किमी/घंटा
2. ✘ 45 किमी/घंटा
3. ✘ 78 किमी/घंटा
4. ✔ 30 किमी/घंटा

Question Number : 105 Question Id : 7368155359 Question Type : MCQ Option Shuffling : Yes Display Question Number : Yes  
Single Line Question Option : No Option Orientation : Vertical

Correct : 1 Wrong : 0.25

How much distance a car can cover in 3 hours if it is travelling with a speed of 34 kmph?

Options :

1. ✘ 512 km
2. ✘ 17 km
3. ✔ 102 km
4. ✘ 12 km

Question Number : 105 Question Id : 7368155359 Question Type : MCQ Option Shuffling : Yes Display Question Number : Yes  
Single Line Question Option : No Option Orientation : Vertical

Correct : 1 Wrong : 0.25

3 घंटे में एक कार कितनी दूरी तय कर सकती है अगर वह 34 किमी प्रति घंटे की गति से चल रही है?

Options :

1. ✘ 512 किमी
2. ✘ 17 किमी
3. ✔ 102 किमी
4. ✘ 12 किमी

Question Number : 106 Question Id : 7368155360 Question Type : MCQ Option Shuffling : Yes Display Question Number : Yes Single Line Question Option : No Option Orientation : Vertical

Correct : 1 Wrong : 0.25

Two trains having lengths 200 m and 250 m, are travelling in opposite direction with a speed of 220 m/s and 380 m/s. How much time they will take to cross each other?

Options :

1. ✔ 0.75 sec
2. ✘ 6.99 sec
3. ✘ 7.5 sec
4. ✘ 8 sec

Question Number : 106 Question Id : 7368155360 Question Type : MCQ Option Shuffling : Yes Display Question Number : Yes Single Line Question Option : No Option Orientation : Vertical

Correct : 1 Wrong : 0.25

दो रेलगाड़ियाँ जिनकी लंबाई 200 मीटर और 250 मीटर है, वह एक दूसरे के विपरीत 220 मी/सेकेंड और 380 मी/सेकेंड से चल रही है। उन्हें एक दूसरे को पार करने में कितना समय लगेगा?

Options :

1. ✔ 0.75 सेकेंड
2. ✘ 6.99 सेकेंड
3. ✘ 7.5 सेकेंड
4. ✘ 8 सेकेंड

Question Number : 107 Question Id : 7368155361 Question Type : MCQ Option Shuffling : Yes Display Question Number : Yes Single Line Question Option : No Option Orientation : Vertical

Correct : 1 Wrong : 0.25

If an article is sold at gain of 35% then selling price will be \_\_\_\_\_ of cost price.

Options :

1. ✘ 100%
2. ✘ 35%
3. ✔ 135%
4. ✘ 65%



Question Number : 107 Question Id : 7368155361 Question Type : MCQ Option Shuffling : Yes Display Question Number : Yes  
Single Line Question Option : No Option Orientation : Vertical

Correct : 1 Wrong : 0.25

यदि एक सामग्री को 35% लाभ के साथ बेचा गया है, तो उसकी विक्रय मूल्य, क्रय मूल्य की \_\_\_\_\_ होगी?

Options :

1. ✘ 100%
2. ✘ 35%
3. ✔ 135%
4. ✘ 65%

Question Number : 108 Question Id : 7368155362 Question Type : MCQ Option Shuffling : Yes Display Question Number : Yes  
Single Line Question Option : No Option Orientation : Vertical

Correct : 1 Wrong : 0.25

Cost price of a toy car is 450 Rupees. If the gain is 20% then what will be the selling price of that toy car?

Options :

1. ✘ Rs. 670
2. ✔ Rs. 540
3. ✘ Rs. 320
4. ✘ Rs. 660

Question Number : 108 Question Id : 7368155362 Question Type : MCQ Option Shuffling : Yes Display Question Number : Yes  
Single Line Question Option : No Option Orientation : Vertical

Correct : 1 Wrong : 0.25

एक खिलौने वाली कार का क्रय मूल्य 450 रु है। अगर लाभ 20% है, तो उसका विक्रय मूल्य कितना होगा?

Options :

1. ✘ रु. 670
2. ✔ रु. 540
3. ✘ रु. 320
4. ✘ रु. 660

Question Number : 109 Question Id : 7368155363 Question Type : MCQ Option Shuffling : Yes Display Question Number : Yes  
Single Line Question Option : No Option Orientation : Vertical

Correct : 1 Wrong : 0.25

If HIMAWARI is coded as GJLBVBQJ then KARISHMA will be coded as :

Options :

1. ✘ GRTYUIO
2. ✔ JBQJRILB
3. ✘ JKQSRJMC

4. ✖ RTHNFDS

Question Number : 109 Question Id : 7368155363 Question Type : MCQ Option Shuffling : Yes Display Question Number : Yes  
Single Line Question Option : No Option Orientation : Vertical

Correct : 1 Wrong : 0.25

यदि HIMAWARI को कोड भाषा में GJLBVBQJ लिखा जाता है, तो KARISHMA को किस प्रकार कोड किया जायेगा?

Options :

1. ✖ GRTYUIO
2. ✔ JBQJRILB
3. ✖ JKQSRJMC
4. ✖ RTHNFDS

Question Number : 110 Question Id : 7368155364 Question Type : MCQ Option Shuffling : Yes Display Question Number : Yes  
Single Line Question Option : No Option Orientation : Vertical

Correct : 1 Wrong : 0.25

If dog is cat, cat is mouse, mouse is hen and hen is horse. Who gives us egg?

Options :

1. ✖ Hen
2. ✔ Horse
3. ✖ Cat
4. ✖ Mouse

Question Number : 110 Question Id : 7368155364 Question Type : MCQ Option Shuffling : Yes Display Question Number : Yes  
Single Line Question Option : No Option Orientation : Vertical

Correct : 1 Wrong : 0.25

यदि कुत्ता बिल्ली है, बिल्ली चूहा है, चूहा मुर्गी है और मुर्गी घोड़ा है। तो फिर हमें अंडे कौन देता है?

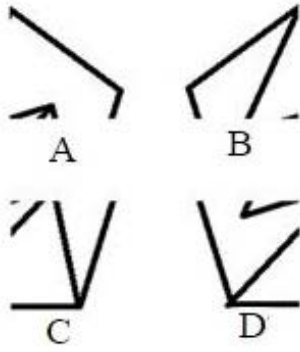
Options :

1. ✖ मुर्गी
2. ✔ घोड़ा
3. ✖ बिल्ली
4. ✖ चूहा

Question Number : 111 Question Id : 7368155365 Question Type : MCQ Option Shuffling : Yes Display Question Number : Yes  
Single Line Question Option : No Option Orientation : Vertical

Correct : 1 Wrong : 0.25

What will be correct figure which can be formed by the parts A, B, C and D?

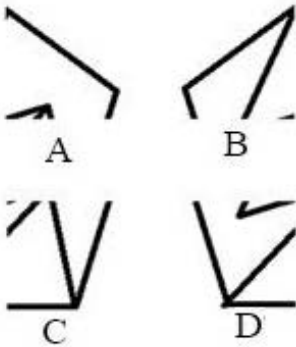


Options :

- 1. ✘
- 2. ✘
- 3. ✘
- 4. ✔

Question Number : 111 Question Id : 7368155365 Question Type : MCQ Option Shuffling : Yes Display Question Number : Yes  
Single Line Question Option : No Option Orientation : Vertical  
Correct : 1 Wrong : 0.25

A, B, C और D से कौन सी सही आकृति बन सकती है?



Options :

- 1. ✘
- 2. ✘
- 3. ✘
- 4. ✔

Question Number : 112 Question Id : 7368155366 Question Type : MCQ Option Shuffling : Yes Display Question Number : Yes  
Single Line Question Option : No Option Orientation : Vertical  
Correct : 1 Wrong : 0.25

If bangle is called whistle, whistle is called table, table is called cassette, and cassette is called box then which is played in the tape recorder?

Options :

1. ✘ Table
2. ✔ Box
3. ✘ Whistle
4. ✘ Cassette

Question Number : 112 Question Id : 7368155366 Question Type : MCQ Option Shuffling : Yes Display Question Number : Yes  
Single Line Question Option : No Option Orientation : Vertical

Correct : 1 Wrong : 0.25

यदि एक चूड़ी को सीटी कहते हैं, सीटी को टेबल, टेबल को कैसेट, कैसेट को डिब्बा, तो फिर हम टेप रिकॉर्डर में किसे बजाते हैं?

Options :

1. ✘ टेबल
2. ✔ डिब्बा
3. ✘ कड़ा
4. ✘ कैसेट

Question Number : 113 Question Id : 7368155367 Question Type : MCQ Option Shuffling : Yes Display Question Number : Yes  
Single Line Question Option : No Option Orientation : Vertical

Correct : 1 Wrong : 0.25

If cow is air, air is sand, sand is plateau, plateau is well, well is island and island is sky then from where will a woman draw water?

Options :

1. ✘ Sand
2. ✘ Plateau
3. ✘ Sky
4. ✔ Island

Question Number : 113 Question Id : 7368155367 Question Type : MCQ Option Shuffling : Yes Display Question Number : Yes  
Single Line Question Option : No Option Orientation : Vertical

Correct : 1 Wrong : 0.25

यदि गाय हवा है, हवा रेत है, रेत पठार है, पठार कुआँ है, कुआँ टापू है और टापू आसमान है, तो फिर एक औरत पानी कहाँ से निकालेगी?

Options :

1. ✘ रेत
2. ✘ पठार
3. ✘ आसमान
4. ✔ टापू

Question Number : 114 Question Id : 7368155368 Question Type : MCQ Option Shuffling : Yes Display Question Number : Yes  
Single Line Question Option : No Option Orientation : Vertical

Correct : 1 Wrong : 0.25

In certain language GAIN is coded as DXFK, in the same language LOSS will be coded as:

Options :

1. ✘ MNSS
2. ✔ ILPP
3. ✘ ZNOO
4. ✘ ASKK

Question Number : 114 Question Id : 7368155368 Question Type : MCQ Option Shuffling : Yes Display Question Number : Yes  
Single Line Question Option : No Option Orientation : Vertical

Correct : 1 Wrong : 0.25

किसी विशिष्ट भाषा में GAIN को DXFK में कोडित किया गया है, तो उसी भाषा में  
LOSS को किस प्रकार कोडित किया जाएगा?

Options :

1. ✘ MNSS
2. ✔ ILPP
3. ✘ ZNOO
4. ✘ ASKK

Question Number : 115 Question Id : 7368155369 Question Type : MCQ Option Shuffling : Yes Display Question Number : Yes  
Single Line Question Option : No Option Orientation : Vertical

Correct : 1 Wrong : 0.25

In a certain language LOSSING is coded as MNTRJMH, in the same language SUCCESS  
will be coded as :

Options :

1. ✔ TTDBFRT
2. ✘ RRTEAW
3. ✘ TRDESSR
4. ✘ TRDDFTT

Question Number : 115 Question Id : 7368155369 Question Type : MCQ Option Shuffling : Yes Display Question Number : Yes  
Single Line Question Option : No Option Orientation : Vertical

Correct : 1 Wrong : 0.25

किसी विशिष्ट भाषा में LOSSING को MNTRJMH में कोडित किया गया है, तो उसी  
भाषा में SUCCESS को किस प्रकार कोडित किया जाएगा?

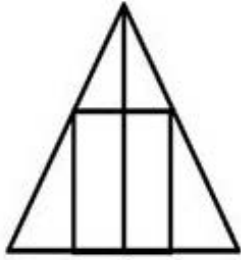
Options :

1. ✔ TTDBFRT
2. ✘ RRTEAW
3. ✘ TRDESSR
4. ✘ TRDDFTT

Question Number : 116 Question Id : 7368155370 Question Type : MCQ Option Shuffling : Yes Display Question Number : Yes  
Single Line Question Option : No Option Orientation : Vertical

Correct : 1 Wrong : 0.25

How many triangles are there in the given figure?



Options :

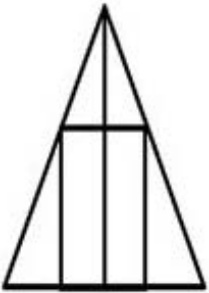
1. ✓ 5
2. ✗ 3
3. ✗ 6
4. ✗ 7

Note: For this question, discrepancy is found in question/answer. Full Marks is being awarded to all candidates.

Question Number : 116 Question Id : 7368155370 Question Type : MCQ Option Shuffling : Yes Display Question Number : Yes  
Single Line Question Option : No Option Orientation : Vertical

Correct : 1 Wrong : 0.25

दी गई आकृति में कितने त्रिकोण हैं?



Options :

1. ✓ 5
2. ✗ 3
3. ✗ 6
4. ✗ 7

Note: For this question, discrepancy is found in question/answer. Full Marks is being awarded to all candidates.

Question Number : 117 Question Id : 7368155371 Question Type : MCQ Option Shuffling : Yes Display Question Number : Yes  
Single Line Question Option : No Option Orientation : Vertical

Correct : 1 Wrong : 0.25

Compute the following

$$322+334-123+345 \times 234$$

Options :

1. ✗ 45632
2. ✗ 66534
3. ✗ 99865

4. ✓ 81263

Question Number : 117 Question Id : 7368155371 Question Type : MCQ Option Shuffling : Yes Display Question Number : Yes  
Single Line Question Option : No Option Orientation : Vertical

Correct : 1 Wrong : 0.25

निम्न की गणना कीजिये:

$$322 + 334 - 123 + 345 \times 234$$

Options :

1. ✗ 45632
2. ✗ 66534
3. ✗ 99865
4. ✓ 81263

Question Number : 118 Question Id : 7368155372 Question Type : MCQ Option Shuffling : Yes Display Question Number : Yes  
Single Line Question Option : No Option Orientation : Vertical

Correct : 1 Wrong : 0.25

Compute the following

$$7.8^2 + 23.5^2 + 1.8^2$$

Options :

1. ✓ 616.33
2. ✗ 456.33
3. ✗ 871.1
4. ✗ 120.11

Question Number : 118 Question Id : 7368155372 Question Type : MCQ Option Shuffling : Yes Display Question Number : Yes  
Single Line Question Option : No Option Orientation : Vertical

Correct : 1 Wrong : 0.25

निम्न की गणना कीजिये:

$$7.8^2 + 23.5^2 + 1.8^2$$

Options :

1. ✓ 616.33
2. ✗ 456.33
3. ✗ 871.1
4. ✗ 120.11

Question Number : 119 Question Id : 7368155373 Question Type : MCQ Option Shuffling : Yes Display Question Number : Yes  
Single Line Question Option : No Option Orientation : Vertical

Correct : 1 Wrong : 0.25

Five girls are sitting in a row. Seema is right of Rajni and left to Geeta. Anita is sitting left to Rajni. Arti is between Rajni and Anita. Who is sitting between Seema and Arti?

Options :

1. ✗ Geeta
2. ✗ Seema

3. ✓ Rajni

4. ✗ Anita

Question Number : 119 Question Id : 7368155373 Question Type : MCQ Option Shuffling : Yes Display Question Number : Yes  
Single Line Question Option : No Option Orientation : Vertical

Correct : 1 Wrong : 0.25

पांच लडकियां एक पंक्ति में बैठी हैं। सीमा रजनी के दाहिनी ओर और गीता बाएँ ओर बैठी है, अनीता रजनी के बाएँ ओर बैठी है, आरती रजनी और अनीता के बीच में है। सीमा और आरती के बीच कौन बैठा है?

Options :

1. ✗ गीता

2. ✗ सीमा

3. ✓ रजनी

4. ✗ अनीता

Question Number : 120 Question Id : 7368155374 Question Type : MCQ Option Shuffling : Yes Display Question Number : Yes  
Single Line Question Option : No Option Orientation : Vertical

Correct : 1 Wrong : 0.25

Compute the following.

$$12.3/23.2+(123+45.3)\times 121+667$$

Options :

1. ✗ 11234.33

2. ✓ 21031.83

3. ✗ 12211.33

4. ✗ 567.99

Question Number : 120 Question Id : 7368155374 Question Type : MCQ Option Shuffling : Yes Display Question Number : Yes  
Single Line Question Option : No Option Orientation : Vertical

Correct : 1 Wrong : 0.25

निम्नलिखित की गणना कीजिये:

$$12.3 / 23.2 + (123+45.3) \times 121 + 667$$

Options :

1. ✗ 11234.33

2. ✓ 21031.83

3. ✗ 12211.33

4. ✗ 567.99

Question Number : 121 Question Id : 7368155375 Question Type : MCQ Option Shuffling : Yes Display Question Number : Yes  
Single Line Question Option : No Option Orientation : Vertical

Correct : 1 Wrong : 0.25



निम्नलिखित की गणना कीजिये:

$$((2.5)^2)^3$$

Options :

1. ✓ 244.140
2. ✗ 123.445
3. ✗ 445.32
4. ✗ 667.245

Question Number : 121 Question Id : 7368155375 Question Type : MCQ Option Shuffling : Yes Display Question Number : Yes  
Single Line Question Option : No Option Orientation : Vertical

Correct : 1 Wrong : 0.25

Compute the following

$$((2.5)^2)^3$$

Options :

1. ✓ 244.140
2. ✗ 123.445
3. ✗ 445.32
4. ✗ 667.245

Question Number : 122 Question Id : 7368155376 Question Type : MCQ Option Shuffling : Yes Display Question Number : Yes  
Single Line Question Option : No Option Orientation : Vertical

Correct : 1 Wrong : 0.25

An unknown girl who is travelling along with you in the bus, requires medical emergency due to some internal problems. What would you do if there is no doctor in the bus?

Options :

1. ✗ Take the lead and try to arrange a doctor in the nearest city as early as possible
2. ✓ Tell the bus conductor to take the bus to a nearby hospital
3. ✗ Won't do anything because that is not your personal look out
4. ✗ Tell everyone in the bus not to help the girl as she is unknown

Question Number : 122 Question Id : 7368155376 Question Type : MCQ Option Shuffling : Yes Display Question Number : Yes  
Single Line Question Option : No Option Orientation : Vertical

Correct : 1 Wrong : 0.25

एक अनजान लड़की जो आपके साथ सफ़र कर रही है उसे अंदरूनी तकलीफ के कारण आपातकालीन चिकित्सा की जरूरत है। आप क्या करेंगे अगर बस में कोई भी डॉक्टर नहीं है?

Options :

1. ✗ आगे बढ़ेंगे और जितनी जल्दी हो सके पास के शहर से डॉक्टर की व्यवस्था करेंगे  
बस के कंडक्टर को इस परिस्थिति से अवगत कराएँगे एवं जितनी जल्दी हो सके पास के
2. ✓ किसी नजदीकी अ

3. ✘ कुछ भी नहीं करेंगे क्योंकि यह मेरा व्यक्तिगत मामला नहीं है

4. ✘ सबको उस लड़की की सहायता करने से मना करेंगे क्योंकि हम उसे नहीं जानते

Question Number : 123 Question Id : 7368155377 Question Type : MCQ Option Shuffling : Yes Display Question Number : Yes  
Single Line Question Option : No Option Orientation : Vertical

Correct : 1 Wrong : 0.25

You are an auto driver. A person who has travelled in your auto has lost his bag in the auto itself. What will you do?

Options :

1. ✘ Keep the bag with you and run away

2. ✘ Search the contents of the bag

3. ✔ Search for the person. If not found, give the bag to the police.

4. ✘ Straight away go to the police and tell them that you find it somewhere else

Question Number : 123 Question Id : 7368155377 Question Type : MCQ Option Shuffling : Yes Display Question Number : Yes  
Single Line Question Option : No Option Orientation : Vertical

Correct : 1 Wrong : 0.25

आप एक ऑटो चालक हैं। एक व्यक्ति जो आपकी ऑटो में बैठा था, अपना बैग ऑटो में ही भूल गया है। आप क्या करेंगे?

Options :

1. ✘ बैग अपने पास रखकर भाग जाएँगे

2. ✘ बैग की चीजों की छानबीन करेंगे

3. ✔ उस व्यक्ति को ढूँढेंगे। अगर वह व्यक्ति नहीं मिला तो बैग पुलिस के हवाले कर देंगे

4. ✘ सीधे पुलिस के पास जाएँगे और उन्हें यह बताएँगे कि आपको यह कहीं और से मिला

Question Number : 124 Question Id : 7368155378 Question Type : MCQ Option Shuffling : Yes Display Question Number : Yes  
Single Line Question Option : No Option Orientation : Vertical

Correct : 1 Wrong : 0.25

You are a Manager. One of your employee is irregular in coming to the office. What will you do?

Options :

1. ✘ Fire him straight away

2. ✘ Ask for some bribe to settle down the thing

3. ✔ Ask for the reason and then take an appropriate action

4. ✘ Won't do anything

Question Number : 124 Question Id : 7368155378 Question Type : MCQ Option Shuffling : Yes Display Question Number : Yes  
Single Line Question Option : No Option Orientation : Vertical

Correct : 1 Wrong : 0.25

आप एक प्रबंधक हैं। आपका एक कर्मचारी कार्यालय आने में अनियमित है। आप क्या करेंगे?

Options :

1. ✘ उसे सीधे बर्खास्त कर देंगे
2. ✘ उससे मामला सुलझाने के लिए कुछ रिश्वत लेंगे
3. ✔ कारण पूछेंगे और फिर उसके मुताबिक कदम उठाएंगे
4. ✘ कुछ भी नहीं करेंगे

Question Number : 125 Question Id : 7368155379 Question Type : MCQ Option Shuffling : Yes Display Question Number : Yes  
Single Line Question Option : No Option Orientation : Vertical

Correct : 1 Wrong : 0.25

An old man is walking down the street in the dark. You are passing by. What will you do?

Options :

1. ✘ Ask him if you can drop him to his destination
2. ✔ Ask him where he wants to go and then drop him to a safe place near his destination
3. ✘ Ask him and go away
4. ✘ Won't ask anything

Question Number : 125 Question Id : 7368155379 Question Type : MCQ Option Shuffling : Yes Display Question Number : Yes  
Single Line Question Option : No Option Orientation : Vertical

Correct : 1 Wrong : 0.25

एक बूढ़ा आदमी अँधेरे में सड़क पर चल रहा है। आप उनके करीब से निकल रहे हैं। आप क्या करेंगे?

Options :

1. ✘ उन्हें उनके स्थान तक छोड़ने के लिए पूछेंगे
2. ✔ उनसे पूछेंगे कि उन्हें कहा जाना है और किसी भी पास के सुरक्षित स्थान पर छोड़ देंगे
3. ✘ उनसे पूछेंगे और चले जाएँगे
4. ✘ कुछ भी नहीं पूछेंगे

Question Number : 126 Question Id : 7368155380 Question Type : MCQ Option Shuffling : Yes Display Question Number : Yes  
Single Line Question Option : No Option Orientation : Vertical

Correct : 1 Wrong : 0.25

The street light of your street isn't working and it's dangerous for students especially girls who return to home after coaching in late evening. What will you do?

Options :

1. ✘ You yourself will get it right
2. ✘ Ask for the people to get it right

3. ✓ Ask for the appropriate authority to get it right
4. ✗ Won't get it rectified as your child does not goes to coaching.

Question Number : 126 Question Id : 7368155380 Question Type : MCQ Option Shuffling : Yes Display Question Number : Yes  
Single Line Question Option : No Option Orientation : Vertical

Correct : 1 Wrong : 0.25

आपकी सड़क की बत्ती काम नहीं कर रही है और यह छात्रों के लिए बहुत खतरनाक है  
विशेषतः लड़कियों के लिए जो शाम के समय कोचिंग के बाद घर लौटती हैं। आप क्या करेंगे?

Options :

1. ✗ आप खुद से ही उसे सुधरवाएंगे
2. ✗ लोगो की मदद लेंगे उसे सुधारने के लिए
3. ✓ प्राधिकारी से पूछेंगे उसे सुधारने के लिए
4. ✗ आप नहीं सुधरवाएंगे क्योंकि आपके बच्चे कोचिंग नहीं जाते हैं

Question Number : 127 Question Id : 7368155381 Question Type : MCQ Option Shuffling : Yes Display Question Number : Yes  
Single Line Question Option : No Option Orientation : Vertical

Correct : 1 Wrong : 0.25

Statement: He was fined for not wearing a Helmet while riding a bike.

Argument 1: Taking fine for everything has now become a trend

Argument 2: Wearing a helmet while riding a bike is necessary

Options :

1. ✗ Argument 1 is strong
2. ✓ Argument 2 is strong
3. ✗ Both the Arguments are strong
4. ✗ Neither of the Arguments are strong

Question Number : 127 Question Id : 7368155381 Question Type : MCQ Option Shuffling : Yes Display Question Number : Yes  
Single Line Question Option : No Option Orientation : Vertical

Correct : 1 Wrong : 0.25

कथन: गाड़ी चलाते समय हैलमेट न पहनने पर उसपर चालान लगाया गया

तर्क 1: हर चीज़ में चालान लगाना आज कल का चलन बन गया है

तर्क 2: गाड़ी चलाते समय हैलमेट पहनना आवश्यक है

Options :

1. ✗ तर्क 1 ठोस है
2. ✓ तर्क 2 ठोस है

3. ✘ दोनों ही तर्क ठोस हैं

4. ✘ कोई भी तर्क ठोस नहीं हैं

Question Number : 128 Question Id : 7368155382 Question Type : MCQ Option Shuffling : Yes Display Question Number : Yes  
Single Line Question Option : No Option Orientation : Vertical

Correct : 1 Wrong : 0.25

Statement: The use of dangerous chemicals in fire crackers must be banned.

Argument 1: They cause air pollution

Argument 2: They are not a way to employment in the country

Options :

1. ✔ Argument 1 is strong

2. ✘ Argument 2 is strong

3. ✘ Both the Arguments are strong

4. ✘ Neither of the Arguments are strong

Question Number : 128 Question Id : 7368155382 Question Type : MCQ Option Shuffling : Yes Display Question Number : Yes  
Single Line Question Option : No Option Orientation : Vertical

Correct : 1 Wrong : 0.25

कथन : पटाखों में खतरनाक रसायनों का प्रयोग वर्जित कर देना चाहिए

तर्क 1: वे वायु प्रदूषण का कारण हैं

तर्क 2: वे देश में रोजगार का माध्यम नहीं है

Options :

1. ✔ तर्क 1 ठोस है

2. ✘ तर्क 2 ठोस है

3. ✘ दोनों ही तर्क ठोस हैं

4. ✘ कोई भी तर्क ठोस नहीं हैं

Question Number : 129 Question Id : 7368155383 Question Type : MCQ Option Shuffling : Yes Display Question Number : Yes  
Single Line Question Option : No Option Orientation : Vertical

Correct : 1 Wrong : 0.25

Statement: Mother Teresa won the Nobel Prize for peace.

Argument 1: She didn't marry

Argument 2: She spent a lot of time alone

Options :

1. ✘ Argument 1 is strong

2. ✘ Argument 2 is strong

3. ✘ Both the Argumer

4. ✓ Neither of the Arguments are strong

Question Number : 129 Question Id : 7368155383 Question Type : MCQ Option Shuffling : Yes Display Question Number : Yes  
Single Line Question Option : No Option Orientation : Vertical

Correct : 1 Wrong : 0.25

कथन: मदर टेरेसा ने शान्ति के लिए नोबेल पुरस्कार जीता

तर्क 1: उन्होंने शादी नहीं की

तर्क 2: उन्होंने काफी समय अकेले व्यतीत किया

Options :

1. ✘ तर्क 1 ठोस है
2. ✘ तर्क 2 ठोस है
3. ✘ दोनों ही तर्क ठोस हैं
4. ✓ कोई भी तर्क ठोस नहीं हैं

Question Number : 130 Question Id : 7368155384 Question Type : MCQ Option Shuffling : Yes Display Question Number : Yes  
Single Line Question Option : No Option Orientation : Vertical

Correct : 1 Wrong : 0.25

Statement: The ratio of Patient to doctor is quite high in India.

Argument 1: There are limited seats as there are less number of medical colleges in India

Argument 2: Indian medical colleges do not produce quality doctors

Options :

1. ✓ Argument 1 is strong
2. ✘ Argument 2 is strong
3. ✘ Both the Arguments are strong
4. ✘ Neither of the Arguments are strong

Question Number : 130 Question Id : 7368155384 Question Type : MCQ Option Shuffling : Yes Display Question Number : Yes  
Single Line Question Option : No Option Orientation : Vertical

Correct : 1 Wrong : 0.25

कथन: भारत में मरीज और चिकित्सक का अनुपात काफी उच्च है

तर्क 1: भारत में बहुत कम मेडिकल कॉलेज होने के कारण बहुत कम सीटें हैं

तर्क 2: भारतीय मेडिकल कॉलेजों से निकलने वाले चिकित्सक गुणवान नहीं हैं

Options :

1. ✓ तर्क 1 ठोस है
2. ✘ तर्क 2 ठोस है
3. ✘ दोनों ही तर्क ठोस हैं

4. ✘ कोई भी तर्क ठोस नहीं है

Question Number : 131 Question Id : 7368155385 Question Type : MCQ Option Shuffling : Yes Display Question Number : Yes  
Single Line Question Option : No Option Orientation : Vertical

Correct : 1 Wrong : 0.25

Statement: The Election Commission has appointed a special team for conducting effective elections at the Naxalite area.

Argument 1: Conducting elections in a Naxalite prone area is quite dangerous

Argument 2: Naxalites kill officials for no cause

Options :

1. ✔ Argument 1 is strong
2. ✘ Argument 2 is strong
3. ✘ Both the Arguments are strong
4. ✘ Neither of the Arguments are strong

Question Number : 131 Question Id : 7368155385 Question Type : MCQ Option Shuffling : Yes Display Question Number : Yes  
Single Line Question Option : No Option Orientation : Vertical

Correct : 1 Wrong : 0.25

कथन : नक्सल प्रभावित क्षेत्र में सुचारू रूप से चुनाव कराने के लिए चुनाव आयोग ने एक विशेष टीम का गठन किया

तर्क 1: नक्सल प्रभावित क्षेत्रों में चुनाव करवाना खतरनाक है

तर्क 2: नक्सली अधिकारियों को बेवजह मारते हैं

Options :

1. ✔ तर्क 1 ठोस है
2. ✘ तर्क 2 ठोस है
3. ✘ दोनों ही तर्क ठोस हैं
4. ✘ कोई भी तर्क ठोस नहीं है

Question Number : 132 Question Id : 7368155386 Question Type : MCQ Option Shuffling : Yes Display Question Number : Yes  
Single Line Question Option : No Option Orientation : Vertical

Correct : 1 Wrong : 0.25

Anita's only son-in-law is the son of Abhay's father. The daughter-in-law of Abhay's father is Anita's

Options :

1. ✘ sister
2. ✘ no relation
3. ✔ daughter
4. ✘ mother

Question Number : 132 Question Id : 7368155386 Question Type : MCQ Option Shuffling : Yes Display Question Number : Yes  
Single Line Question Option : No Option Orientation : Vertical

Correct : 1 Wrong : 0.25

अनीता का इकलौता दामाद अभय के पिता का बेटा है। अभय के पिता की बहू अनीता की क्या लगती है?

Options :

1. ✘ बहन
2. ✘ कोई सम्बन्ध नहीं
3. ✔ बेटी
4. ✘ माता

Question Number : 133 Question Id : 7368155387 Question Type : MCQ Option Shuffling : Yes Display Question Number : Yes  
Single Line Question Option : No Option Orientation : Vertical

Correct : 1 Wrong : 0.25

Pointing towards a photograph, Abhijeet said, "He is the grandfather of my father's wife's daughter" Abhijeet is the man's

Options :

1. ✘ father
2. ✘ son
3. ✘ son-in-law
4. ✔ grandson

Question Number : 133 Question Id : 7368155387 Question Type : MCQ Option Shuffling : Yes Display Question Number : Yes  
Single Line Question Option : No Option Orientation : Vertical

Correct : 1 Wrong : 0.25

एक तस्वीर की ओर इशारा करते हुए अभिजीत ने कहा, "ये मेरे पिता की पत्नी की बेटी के दादाजी हैं।" अभिजीत का उस शख्स से क्या सम्बन्ध है?

Options :

1. ✘ पिता
2. ✘ बेटा
3. ✘ दामाद
4. ✔ पोता

Question Number : 134 Question Id : 7368155388 Question Type : MCQ Option Shuffling : Yes Display Question Number : Yes  
Single Line Question Option : No Option Orientation : Vertical

Correct : 1 Wrong : 0.25

The grandson of Mukesh's grandfather is the father of Sukanya's daughter. Who is Sukanya's mother-in-law to the grandfather mentioned?

Options :

1. ✘ Daughter
2. ✔ Daughter-in-law
3. ✘ Sister-in-law



4. ✘ Sister

Question Number : 134 Question Id : 7368155388 Question Type : MCQ Option Shuffling : Yes Display Question Number : Yes  
Single Line Question Option : No Option Orientation : Vertical

Correct : 1 Wrong : 0.25

मुकेश के दादा का पोता सुकन्या की बेटी का पिता है। सुकन्या की सास उसके दादा की क्या लगती है?

Options :

1. ✘ बेटी

2. ✔ बहू

3. ✘ साली

4. ✘ बहन

Question Number : 135 Question Id : 7368155389 Question Type : MCQ Option Shuffling : Yes Display Question Number : Yes  
Single Line Question Option : No Option Orientation : Vertical

Correct : 1 Wrong : 0.25

The only son of Harish's brother is \_\_\_\_\_ to the Harish's smallest son

Options :

1. ✘ in no relation

2. ✘ brother

3. ✔ cousin

4. ✘ uncle

Question Number : 135 Question Id : 7368155389 Question Type : MCQ Option Shuffling : Yes Display Question Number : Yes  
Single Line Question Option : No Option Orientation : Vertical

Correct : 1 Wrong : 0.25

हरीश के भाई का इकलौता बेटा हरीश के सबसे छोटे बेटे का \_\_\_\_\_ है।

Options :

1. ✘ कोई नहीं

2. ✘ भाई

3. ✔ चचेरा भाई

4. ✘ चाचा

Question Number : 136 Question Id : 7368155390 Question Type : MCQ Option Shuffling : Yes Display Question Number : Yes  
Single Line Question Option : No Option Orientation : Vertical

Correct : 1 Wrong : 0.25

Rinku is the elder son of Sandhya. Tinku, being the younger son is the paternal uncle of Mishti. If Shobha is the mother of Mishti, then Sandhya is \_\_\_\_\_ of Shobha

Options :

1. ✘ Daughter

2. ✘ Daughter-in-law

3. ✓ Mother-in-law

4. ✗ Sister

Question Number : 136 Question Id : 7368155390 Question Type : MCQ Option Shuffling : Yes Display Question Number : Yes  
Single Line Question Option : No Option Orientation : Vertical

Correct : 1 Wrong : 0.25

रिंकू, संध्या का बड़ा बेटा है। टिंकू, छोटा बेटा है और मिष्ठी का चाचा है। अगर शोभा मिष्ठी की माता है, तो संध्या शोभा की \_\_\_\_\_ है।

Options :

1. ✗ बेटी

2. ✗ बहू

3. ✓ सास

4. ✗ बहन

Question Number : 137 Question Id : 7368155391 Question Type : MCQ Option Shuffling : Yes Display Question Number : Yes  
Single Line Question Option : No Option Orientation : Vertical

Correct : 1 Wrong : 0.25

Find the odd one out from the given alternatives

Options :

1. ✗ Bromine

2. ✗ Iodine

3. ✗ Chlorine

4. ✓ Phosphine

Question Number : 137 Question Id : 7368155391 Question Type : MCQ Option Shuffling : Yes Display Question Number : Yes  
Single Line Question Option : No Option Orientation : Vertical

Correct : 1 Wrong : 0.25

दिए हुए विकल्पों में से भिन्न को चुनिए:

Options :

1. ✗ ब्रोमीन

2. ✗ आयोडीन

3. ✗ क्लोरीन

4. ✓ फोस्फिन

Question Number : 138 Question Id : 7368155392 Question Type : MCQ Option Shuffling : Yes Display Question Number : Yes  
Single Line Question Option : No Option Orientation : Vertical

Correct : 1 Wrong : 0.25

Which one of following keywords/phrases differ from the others in the given options?

Options :

1. ✗ NPQ

2. ✗ RTU

3. ✘ JLM

4. ✔ MOQ

Question Number : 138 Question Id : 7368155392 Question Type : MCQ Option Shuffling : Yes Display Question Number : Yes  
Single Line Question Option : No Option Orientation : Vertical

Correct : 1 Wrong : 0.25

निम्नलिखित में से कौन सा मुख्य शब्द/वाक्यांश दिए हुए विकल्पों से भिन्न है?

Options :

1. ✘ NPQ

2. ✘ RTU

3. ✘ JLM

4. ✔ MOQ

Question Number : 139 Question Id : 7368155393 Question Type : MCQ Option Shuffling : Yes Display Question Number : Yes  
Single Line Question Option : No Option Orientation : Vertical

Correct : 1 Wrong : 0.25

In the given alternatives, one of the number is dissimilar from the other given alternatives.  
Find the one which is dissimilar

Options :

1. ✘ 91

2. ✘ 13

3. ✘ 51

4. ✔ 65

Question Number : 139 Question Id : 7368155393 Question Type : MCQ Option Shuffling : Yes Display Question Number : Yes  
Single Line Question Option : No Option Orientation : Vertical

Correct : 1 Wrong : 0.25

दिए हुए विकल्पों में से एक संख्या अन्य दी हुई संख्याओं से भिन्न है। वह संख्या ज्ञात करें जो एक समान नहीं है।

Options :

1. ✘ 91

2. ✘ 13

3. ✘ 51

4. ✔ 65

Question Number : 140 Question Id : 7368155394 Question Type : MCQ Option Shuffling : Yes Display Question Number : Yes  
Single Line Question Option : No Option Orientation : Vertical

Correct : 1 Wrong : 0.25

Find the odd one out from the given alternatives

Options :

1. ✔ Volleyball

2. ✘ Golf

3. ✖ Baseball

4. ✖ Cricket

Question Number : 140 Question Id : 7368155394 Question Type : MCQ Option Shuffling : Yes Display Question Number : Yes  
Single Line Question Option : No Option Orientation : Vertical

Correct : 1 Wrong : 0.25

दिए हुए विकल्पों में से भिन्न को चुनिए:

Options :

1. ✔ वॉलीबॉल

2. ✖ गोल्फ

3. ✖ बेसबॉल

4. ✖ क्रिकेट

Question Number : 141 Question Id : 7368155395 Question Type : MCQ Option Shuffling : Yes Display Question Number : Yes  
Single Line Question Option : No Option Orientation : Vertical

Correct : 1 Wrong : 0.25

Which one of following keywords/phrases differ from the others in the given options?

Options :

1. ✖ TSQ

2. ✔ MLK

3. ✖ NMK

4. ✖ GFD

Question Number : 141 Question Id : 7368155395 Question Type : MCQ Option Shuffling : Yes Display Question Number : Yes  
Single Line Question Option : No Option Orientation : Vertical

Correct : 1 Wrong : 0.25

निम्नलिखित में से कौनसा मुख्य शब्द/वाक्यांश दिए हुए विकल्पों में से भिन्न है?

Options :

1. ✖ TSQ

2. ✔ MLK

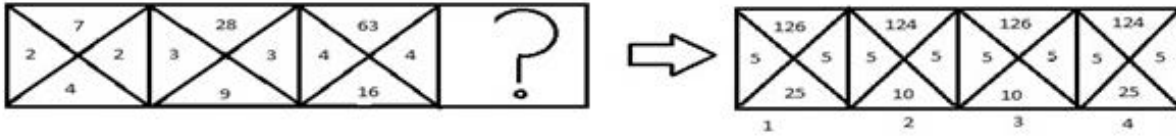
3. ✖ NMK

4. ✖ GFD

Question Number : 142 Question Id : 7368155396 Question Type : MCQ Option Shuffling : Yes Display Question Number : Yes  
Single Line Question Option : No Option Orientation : Vertical

Correct : 1 Wrong : 0.25

Select a figure amongst the Answer Figures which will continue the same series as established by the three Problem Figures



Options :

- 1. ✘ 2
- 2. ✘ 3
- 3. ✔ 1
- 4. ✘ 4

Question Number : 142 Question Id : 7368155396 Question Type : MCQ Option Shuffling : Yes Display Question Number : Yes Single Line Question Option : No Option Orientation : Vertical

Correct : 1 Wrong : 0.25

दिए हुए उत्तर चित्रों में से उस चित्र को चुनिए जो प्रश्न चित्रों में दर्शाई गई समस्या चित्र श्रेणी को जारी रख सके :



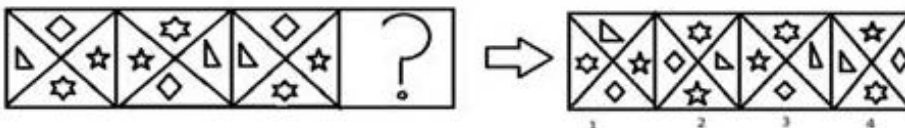
Options :

- 1. ✘ 2
- 2. ✘ 3
- 3. ✔ 1
- 4. ✘ 4

Question Number : 143 Question Id : 7368155397 Question Type : MCQ Option Shuffling : Yes Display Question Number : Yes Single Line Question Option : No Option Orientation : Vertical

Correct : 1 Wrong : 0.25

Select a figure amongst the Answer Figures which will continue the same series as established by the three Problem Figures

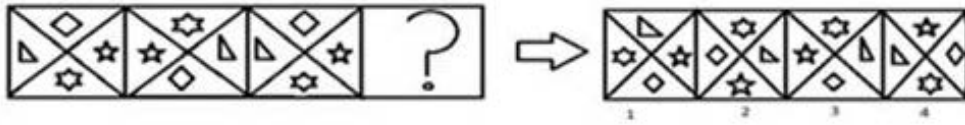


Options :

- 1. ✘ 2
- 2. ✔ 3
- 3. ✘ 1
- 4. ✘ 4

Correct : 1 Wrong : 0.25

दिए हुए उत्तर चित्रों में से उस चित्र को चुनिए जो प्रश्न चित्रों में दर्शाई गई समस्या चित्र श्रेणी को जारी रख सके:

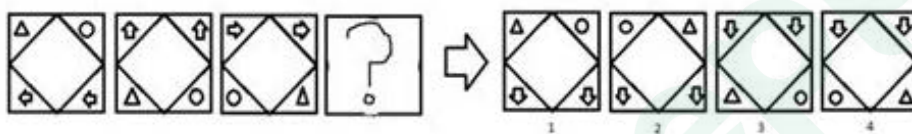


Options :

- 1. ✘ 2
- 2. ✔ 3
- 3. ✘ 1
- 4. ✘ 4

Correct : 1 Wrong : 0.25

Select a figure amongst the Answer Figures which will continue the same series as established by the three Problem Figures

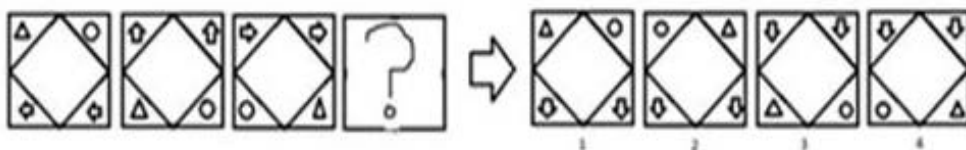


Options :

- 1. ✔ 2
- 2. ✘ 3
- 3. ✘ 1
- 4. ✘ 4

Correct : 1 Wrong : 0.25

दिए हुए उत्तर चित्रों में से उस चित्र को चुनिए जो प्रश्न चित्रों में दर्शाई गई समस्या चित्र श्रेणी को जारी रख सके:



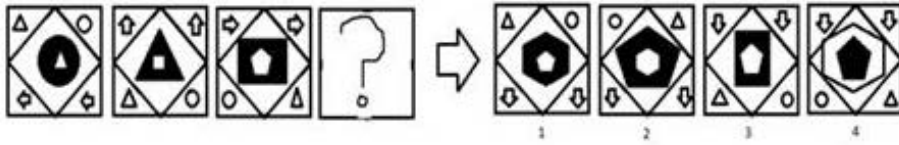
Options :

- 1. ✔ 2
- 2. ✘ 3
- 3. ✘ 1
- 4. ✘ 4

Question Number : 145 Question Id : 7368155399 Question Type : MCQ Option Shuffling : Yes Display Question Number : Yes  
 Single Line Question Option : No Option Orientation : Vertical

Correct : 1 Wrong : 0.25

Select a figure amongst the Answer Figures which will continue the same series as established by the three Problem Figures



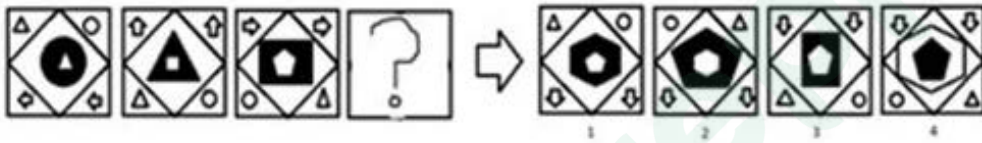
Options :

- 1. ✓ 2
- 2. ✗ 3
- 3. ✗ 1
- 4. ✗ 4

Question Number : 145 Question Id : 7368155399 Question Type : MCQ Option Shuffling : Yes Display Question Number : Yes  
 Single Line Question Option : No Option Orientation : Vertical

Correct : 1 Wrong : 0.25

दिए हुए उत्तर चित्रों में से उस चित्र को चुनिए जो प्रश्न चित्रों में दर्शाई गई समस्या चित्र श्रेणी को जारी रख सके :



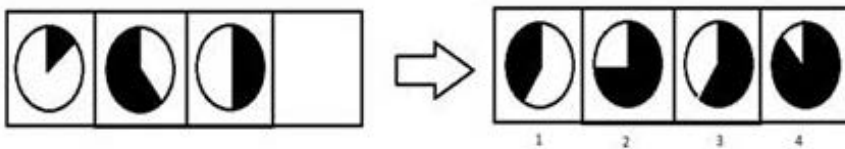
Options :

- 1. ✓ 2
- 2. ✗ 3
- 3. ✗ 1
- 4. ✗ 4

Question Number : 146 Question Id : 7368155400 Question Type : MCQ Option Shuffling : Yes Display Question Number : Yes  
 Single Line Question Option : No Option Orientation : Vertical

Correct : 1 Wrong : 0.25

Select a figure amongst the Answer Figures which will continue the same series as established by the three Problem Figures



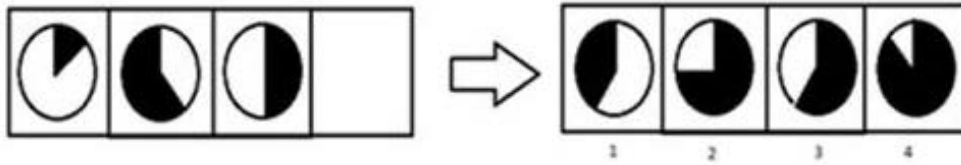
Options :

- 1. ✗ 2
- 2. ✗ 3
- 3. ✓ 1
- 4. ✗ 4

Question Number : 146 Question Id : 7368155400 Question Type : MCQ Option Shuffling : Yes Display Question Number : Yes  
Single Line Question Option : No Option Orientation : Vertical

Correct : 1 Wrong : 0.25

दिए हुए उत्तर चित्रों में से उस चित्र को चुनिए जो प्रश्न चित्रों में दर्शाई गई समस्या चित्र श्रेणी को जारी रख सके:



Options :

1. ✘ 2
2. ✘ 3
3. ✔ 1
4. ✘ 4

Question Number : 147 Question Id : 7368155401 Question Type : MCQ Option Shuffling : Yes Display Question Number : Yes  
Single Line Question Option : No Option Orientation : Vertical

Correct : 1 Wrong : 0.25

Find the missing term of the series.

135,246,357,\_\_\_\_\_,579

Options :

1. ✘ 435
2. ✔ 468
3. ✘ 444
4. ✘ 456

Question Number : 147 Question Id : 7368155401 Question Type : MCQ Option Shuffling : Yes Display Question Number : Yes  
Single Line Question Option : No Option Orientation : Vertical

Correct : 1 Wrong : 0.25

नहीं दी गई पद को ज्ञात कीजिये:

135,246,357,.....,579

Options :

1. ✘ 435
2. ✔ 468
3. ✘ 444
4. ✘ 456

Question Number : 148 Question Id : 7368155402 Question Type : MCQ Option Shuffling : Yes Display Question Number : Yes  
Single Line Question Option : No Option Orientation : Vertical

Correct : 1 Wrong : 0.25

Find the missing term of the series.

29,92,49,94,\_\_\_\_\_,96

Options :



1. ✓ 69
2. ✗ 39
3. ✗ 49
4. ✗ 59

Question Number : 148 Question Id : 7368155402 Question Type : MCQ Option Shuffling : Yes Display Question Number : Yes  
Single Line Question Option : No Option Orientation : Vertical

Correct : 1 Wrong : 0.25

नहीं दी गई पद को ज्ञात कीजिये:

29,92,49,94,.....,96

Options :

1. ✓ 69
2. ✗ 39
3. ✗ 49
4. ✗ 59

Question Number : 149 Question Id : 7368155403 Question Type : MCQ Option Shuffling : Yes Display Question Number : Yes  
Single Line Question Option : No Option Orientation : Vertical

Correct : 1 Wrong : 0.25

Find the missing term of the series.

101,398,901,1598, \_\_\_\_\_,9598

Options :

1. ✗ 2499
2. ✓ 2501
3. ✗ 8801
4. ✗ 8081

Question Number : 149 Question Id : 7368155403 Question Type : MCQ Option Shuffling : Yes Display Question Number : Yes  
Single Line Question Option : No Option Orientation : Vertical

Correct : 1 Wrong : 0.25

नहीं दी गई पद को ज्ञात कीजिये:

101,398,901,1598,.....,9598

Options :

1. ✗ 2499
2. ✓ 2501
3. ✗ 8801
4. ✗ 8081

Question Number : 150 Question Id : 7368155404 Question Type : MCQ Option Shuffling : Yes Display Question Number : Yes  
Single Line Question Option : No Option Orientation : Vertical

Correct : 1 Wrong : 0.25

Find the missing term of the series.

9582,174,66,72,53, \_\_\_\_\_,25,29

Options :

1. ✘ 43
2. ✘ 67
3. ✔ 34
4. ✘ 16

Question Number : 150 Question Id : 7368155404 Question Type : MCQ Option Shuffling : Yes Display Question Number : Yes  
Single Line Question Option : No Option Orientation : Vertical

Correct : 1 Wrong : 0.25

नहीं दी गई पद को ज्ञात कीजिये:

9582,174,66,72,53,.....,25,29

Options :

1. ✘ 43
2. ✘ 67
3. ✔ 34
4. ✘ 16

### General Awareness

Section Id :	736815106
Section Number :	4
Section type :	Online
Mandatory or Optional:	Mandatory
Number of Questions:	50
Number of Questions to be attempted:	50
Section Marks:	50
Display Number Panel:	Yes
Group All Questions:	No

Sub-Section Number:	1
Sub-Section Id:	736815160
Question Shuffling Allowed :	Yes

Question Number : 151 Question Id : 7368155405 Question Type : MCQ Option Shuffling : Yes Display Question Number : Yes  
Single Line Question Option : No Option Orientation : Vertical

Correct : 1 Wrong : 0.25

What does the Ashoka Chakra in the Indian National flag symbolize?

Options :

1. ✔ Law
2. ✘ Prosperity
3. ✘ Strength

4. ✘ Peace

Question Number : 151 Question Id : 7368155405 Question Type : MCQ Option Shuffling : Yes Display Question Number : Yes  
Single Line Question Option : No Option Orientation : Vertical

Correct : 1 Wrong : 0.25

भारत के राष्ट्रीय ध्वज में अशोक चक्र किसका प्रतीक है?

Options :

1. ✔ विधि
2. ✘ समृद्धि
3. ✘ शक्ति
4. ✘ शांति

Question Number : 152 Question Id : 7368155406 Question Type : MCQ Option Shuffling : Yes Display Question Number : Yes  
Single Line Question Option : No Option Orientation : Vertical

Correct : 1 Wrong : 0.25

Approximately how much time was taken to prepare Indian Constitution?

Options :

1. ✘ Five years
2. ✘ Eight years
3. ✘ Ten Years
4. ✔ Three years

Question Number : 152 Question Id : 7368155406 Question Type : MCQ Option Shuffling : Yes Display Question Number : Yes  
Single Line Question Option : No Option Orientation : Vertical

Correct : 1 Wrong : 0.25

भारतीय संविधान को तैयार करने में लगभग कितना समय लगा था?

Options :

1. ✘ पांच वर्ष
2. ✘ आठ वर्ष
3. ✘ दस वर्ष
4. ✔ तीन वर्ष

Question Number : 153 Question Id : 7368155407 Question Type : MCQ Option Shuffling : Yes Display Question Number : Yes  
Single Line Question Option : No Option Orientation : Vertical

Correct : 1 Wrong : 0.25

What is the width-length ratio of Indian National Flag?

Options :

1. ✘ 2:6
2. ✘ 2:4
3. ✔ 2:3
4. ✘ 2:5

Question Number : 153 Question Id : 7368155407 Question Type : MCQ Option Shuffling : Yes Display Question Number : Yes  
Single Line Question Option : No Option Orientation : Vertical

Correct : 1 Wrong : 0.25

भारत के राष्ट्रीय ध्वज की चौड़ाई-लम्बाई का अनुपात कितना है?

Options :

1. ✘ 2:6
2. ✘ 2:4
3. ✔ 2:3
4. ✘ 2:5

Question Number : 154 Question Id : 7368155408 Question Type : MCQ Option Shuffling : Yes Display Question Number : Yes  
Single Line Question Option : No Option Orientation : Vertical

Correct : 1 Wrong : 0.25

The fundamental duties of Indian Constitution are adopted from?

Options :

1. ✔ Constitution of U.S.S.R
2. ✘ Constitution of Spain
3. ✘ Constitution of China
4. ✘ Constitution of Germany

Question Number : 154 Question Id : 7368155408 Question Type : MCQ Option Shuffling : Yes Display Question Number : Yes  
Single Line Question Option : No Option Orientation : Vertical

Correct : 1 Wrong : 0.25

भारतीय संविधान के मौलिक कर्तव्यों को कहां से अपनाया गया है?

Options :

1. ✔ यू.एस.एस.आर. का संविधान
2. ✘ स्पेन का संविधान
3. ✘ चीन का संविधान
4. ✘ जर्मनी का संविधान

Question Number : 155 Question Id : 7368155409 Question Type : MCQ Option Shuffling : Yes Display Question Number : Yes  
Single Line Question Option : No Option Orientation : Vertical

Correct : 1 Wrong : 0.25

Which part of Indian Constitution contains fundamental rights?

Options :

1. ✔ Part III
2. ✘ Part I
3. ✘ Part II
4. ✘ Part IV

Question Number : 155 Question Id : 7368155409 Question Type : MCQ Option Shuffling : Yes Display Question Number : Yes  
Single Line Question Option : No Option Orientation : Vertical

Correct : 1 Wrong : 0.25

भारतीय संविधान के किस भाग में मौलिक अधिकार मौजूद हैं?

Options :

1. ✓ भाग III
2. ✗ भाग I
3. ✗ भाग II
4. ✗ भाग IV

Question Number : 156 Question Id : 7368155410 Question Type : MCQ Option Shuffling : Yes Display Question Number : Yes  
Single Line Question Option : No Option Orientation : Vertical

Correct : 1 Wrong : 0.25

In which year Bharat Ratna Award was introduced?

Options :

1. ✗ 1966
2. ✓ 1954
3. ✗ 1950
4. ✗ 1940

Question Number : 156 Question Id : 7368155410 Question Type : MCQ Option Shuffling : Yes Display Question Number : Yes  
Single Line Question Option : No Option Orientation : Vertical

Correct : 1 Wrong : 0.25

भारत रत्न पुरस्कार का आरम्भ किस वर्ष में किया गया था?

Options :

1. ✗ 1966
2. ✓ 1954
3. ✗ 1950
4. ✗ 1940

Question Number : 157 Question Id : 7368155411 Question Type : MCQ Option Shuffling : Yes Display Question Number : Yes  
Single Line Question Option : No Option Orientation : Vertical

Correct : 1 Wrong : 0.25

The 'Nobel Prize' is given by which country?

Options :

1. ✓ Sweden
2. ✗ United States of America
3. ✗ England
4. ✗ Switzerland

Question Number : 157 Question Id : 7368155411 Question Type : MCQ Option Shuffling : Yes Display Question Number : Yes  
Single Line Question Option : No Option Orientation : Vertical

Correct : 1 Wrong : 0.25

कौन सा देश 'नोबेल पुरस्कार' देता है?

Options :

1. ✓ स्वीडन
2. ✗ संयुक्त राज्य अमेरिका
3. ✗ इंग्लैंड
4. ✗ स्विज़रलैंड

Question Number : 158 Question Id : 7368155412 Question Type : MCQ Option Shuffling : Yes Display Question Number : Yes  
Single Line Question Option : No Option Orientation : Vertical

Correct : 1 Wrong : 0.25

Who is the first recipient of 'Dada Saheb Phalke' award?

Options :

1. ✗ Raj Kapoor
2. ✓ Devika Rani
3. ✗ Prithviraj Kapoor
4. ✗ Shivaji Ganeshan

Question Number : 158 Question Id : 7368155412 Question Type : MCQ Option Shuffling : Yes Display Question Number : Yes  
Single Line Question Option : No Option Orientation : Vertical

Correct : 1 Wrong : 0.25

सर्वप्रथम 'दादा साहेब फाल्के' पुरस्कार किसे दिया गया था?

Options :

1. ✗ राज कपूर
2. ✓ देविका रानी
3. ✗ पृथ्वीराज कपूर
4. ✗ शिवाजी गणेशन

Question Number : 159 Question Id : 7368155413 Question Type : MCQ Option Shuffling : Yes Display Question Number : Yes  
Single Line Question Option : No Option Orientation : Vertical

Correct : 1 Wrong : 0.25

Which one of the following is the highest military award?

Options :

1. ✗ Nargis Dutt Award
2. ✗ Rajiv Gandhi Award
3. ✗ Dhronacharya Award
4. ✓ Param Vir Chakra

Question Number : 159 Question Id : 7368155413 Question Type : MCQ Option Shuffling : Yes Display Question Number : Yes  
Single Line Question Option : No Option Orientation : Vertical

Latest Sarkari Jobs, Govt Exam Results,  
Vacancies and updates on one click

Know More

play Question Number : Yes

Correct : 1 Wrong : 0.25

निम्नलिखित में से कौन सा सर्वोच्च सैनिक पुरस्कार है?

Options :

1. ✘ नरगिस दत्त पुरस्कार
2. ✘ राजीव गांधी पुरस्कार
3. ✘ द्रोणाचार्य पुरस्कार
4. ✔ परमवीर चक्र

Question Number : 160 Question Id : 7368155414 Question Type : MCQ Option Shuffling : Yes Display Question Number : Yes  
Single Line Question Option : No Option Orientation : Vertical

Correct : 1 Wrong : 0.25

Which of the following award is given by 'The Academy of Motion Picture Arts and Sciences'?

Options :

1. ✔ Oscar Award
2. ✘ Noble Prize
3. ✘ Grammy Award
4. ✘ Booker Prize

Question Number : 160 Question Id : 7368155414 Question Type : MCQ Option Shuffling : Yes Display Question Number : Yes  
Single Line Question Option : No Option Orientation : Vertical

Correct : 1 Wrong : 0.25

'दि एकेडमी ऑफ मोशन पिक्चर्स आर्ट्स एंड साइंसेज' द्वारा निम्नलिखित में से कौन सा पुरस्कार दिया जाता है?

Options :

1. ✔ ऑस्कर पुरस्कार
2. ✘ नोबेल पुरस्कार
3. ✘ ग्रैमी पुरस्कार
4. ✘ बुकर पुरस्कार

Question Number : 161 Question Id : 7368155415 Question Type : MCQ Option Shuffling : Yes Display Question Number : Yes  
Single Line Question Option : No Option Orientation : Vertical

Correct : 1 Wrong : 0.25

Who is the author of the famous book 'Glimpses of World History'?

Options :

1. ✘ Sir Arthur Cotton
2. ✘ Mahatma Gandhi
3. ✘ Lord Mountbatten

4. ✓ Jawaharlal Nehru

Question Number : 161 Question Id : 7368155415 Question Type : MCQ Option Shuffling : Yes Display Question Number : Yes  
Single Line Question Option : No Option Orientation : Vertical

Correct : 1 Wrong : 0.25

'ग्लिम्प्स ऑफ वर्ल्ड हिस्ट्री' नामक प्रसिद्ध पुस्तक के लेखक कौन हैं?

Options :

1. ✗ सर आर्थर कॉटन
2. ✗ महात्मा गांधी
3. ✗ लार्ड माउंटबेटन
4. ✓ जवाहर लाल नेहरू

Question Number : 162 Question Id : 7368155416 Question Type : MCQ Option Shuffling : Yes Display Question Number : Yes  
Single Line Question Option : No Option Orientation : Vertical

Correct : 1 Wrong : 0.25

The autobiography of Madame Curie was translated in Hindi by

Options :

1. ✓ Lal Bahadur Shastri
2. ✗ C.V.Raman
3. ✗ J.C.Bose
4. ✗ Satyajit Ray

Question Number : 162 Question Id : 7368155416 Question Type : MCQ Option Shuffling : Yes Display Question Number : Yes  
Single Line Question Option : No Option Orientation : Vertical

Correct : 1 Wrong : 0.25

निम्नलिखित में से किसने, मैडम क्यूरी की आत्मकथा का हिंदी में अनुवाद किया है?

Options :

1. ✓ लाल बहादुर शास्त्री
2. ✗ सी.वी. रमन
3. ✗ जे. सी. बोस
4. ✗ सत्यजीत रे

Question Number : 163 Question Id : 7368155417 Question Type : MCQ Option Shuffling : Yes Display Question Number : Yes  
Single Line Question Option : No Option Orientation : Vertical

Correct : 1 Wrong : 0.25

Who is considered as the 'Father of English Poetry'?

Options :

1. ✗ Mark Twain
2. ✗ Shakespeare
3. ✗ William Wordsworth



4. ✓ Geoffrey Chaucer

Question Number : 163 Question Id : 7368155417 Question Type : MCQ Option Shuffling : Yes Display Question Number : Yes  
Single Line Question Option : No Option Orientation : Vertical

Correct : 1 Wrong : 0.25

'अंग्रेजी काव्य का पिता' किसे माना जाता है?

Options :

1. ✗ मार्क ट्वैन
2. ✗ शेक्सपियर
3. ✗ विलियम वर्ड्सवर्थ
4. ✓ जेफ्री चौसर

Question Number : 164 Question Id : 7368155418 Question Type : MCQ Option Shuffling : Yes Display Question Number : Yes  
Single Line Question Option : No Option Orientation : Vertical

Correct : 1 Wrong : 0.25

The patriotic song 'Sare jahan se accha' was written by?

Options :

1. ✗ Bhagat Singh
2. ✓ Muhammad Iqbal
3. ✗ Subhashchandra Bose
4. ✗ Bankim Chandra Chatterjee

Question Number : 164 Question Id : 7368155418 Question Type : MCQ Option Shuffling : Yes Display Question Number : Yes  
Single Line Question Option : No Option Orientation : Vertical

Correct : 1 Wrong : 0.25

देशभक्ति गीत 'सारे जहां से अच्छा' किसने लिखा था?

Options :

1. ✗ भगत सिंह
2. ✓ मोहम्मद इकबाल
3. ✗ सुभाषचन्द्र बोस
4. ✗ बंकिम चन्द्र चटर्जी

Question Number : 165 Question Id : 7368155419 Question Type : MCQ Option Shuffling : Yes Display Question Number : Yes  
Single Line Question Option : No Option Orientation : Vertical

Correct : 1 Wrong : 0.25

The author of the world famous book 'Das Kapital' is?

Options :

1. ✓ Karl Marx
2. ✗ Mao Tse Tunge
3. ✗ Adolf Hitler

4. ❌ Idi Amin

Question Number : 165 Question Id : 7368155419 Question Type : MCQ Option Shuffling : Yes Display Question Number : Yes  
Single Line Question Option : No Option Orientation : Vertical

Correct : 1 Wrong : 0.25

‘दास कैपिटल’ नामक प्रसिद्ध पुस्तक के लेखक कौन हैं?

Options :

1. ✓ कार्ल मार्क्स
2. ❌ माओ त्से तुंग
3. ❌ एडॉल्फ हिटलर
4. ❌ इडी एमिन

Question Number : 166 Question Id : 7368155420 Question Type : MCQ Option Shuffling : Yes Display Question Number : Yes  
Single Line Question Option : No Option Orientation : Vertical

Correct : 1 Wrong : 0.25

The traditional dance ‘Dandia’ is popular in?

Options :

1. ❌ Punjab
2. ✓ Gujarat
3. ❌ Uttar Pradesh
4. ❌ Haryana

Question Number : 166 Question Id : 7368155420 Question Type : MCQ Option Shuffling : Yes Display Question Number : Yes  
Single Line Question Option : No Option Orientation : Vertical

Correct : 1 Wrong : 0.25

‘डांडिया’ नामक पारम्परिक नृत्य कहां पर प्रसिद्ध है?

Options :

1. ❌ पंजाब
2. ✓ गुजरात
3. ❌ उत्तर प्रदेश
4. ❌ हरियाणा

Question Number : 167 Question Id : 7368155421 Question Type : MCQ Option Shuffling : Yes Display Question Number : Yes  
Single Line Question Option : No Option Orientation : Vertical

Correct : 1 Wrong : 0.25

‘Mohiniattam’ is a dance originated from the State of?

Options :

1. ❌ Madhya Pradesh
2. ❌ Tamil Nadu
3. ✓ Kerala

4. ✖ Maharashtra

Question Number : 167 Question Id : 7368155421 Question Type : MCQ Option Shuffling : Yes Display Question Number : Yes  
Single Line Question Option : No Option Orientation : Vertical

Correct : 1 Wrong : 0.25

'मोहिनीअट्टम' नामक नृत्य का उद्गम किस राज्य में हुआ?

Options :

1. ✖ मध्य प्रदेश
2. ✖ तमिलनाडु
3. ✔ केरल
4. ✖ महाराष्ट्र

Question Number : 168 Question Id : 7368155422 Question Type : MCQ Option Shuffling : Yes Display Question Number : Yes  
Single Line Question Option : No Option Orientation : Vertical

Correct : 1 Wrong : 0.25

The development of Dance, Drama and Music in India is regulated by

Options :

1. ✔ National Film Institute
2. ✖ National Film Chamber of Commerce
3. ✖ Sangeet Academy
4. ✖ Jawahar Cultural Academy

Note: For this question, discrepancy is found in question/answer. Full Marks is being awarded to all candidates.

Question Number : 168 Question Id : 7368155422 Question Type : MCQ Option Shuffling : Yes Display Question Number : Yes  
Single Line Question Option : No Option Orientation : Vertical

Correct : 1 Wrong : 0.25

भारत में नृत्य, अभिनय एवं संगीत के विकास को किसके द्वारा नियोजित किया जाता है?

Options :

1. ✔ भारतीय फिल्म संस्थान
2. ✖ राष्ट्रीय फिल्म चैम्बर ऑफ कॉमर्स
3. ✖ संगीत अकैडमी
4. ✖ जवाहर सांस्कृतिक अकैडमी

Note: For this question, discrepancy is found in question/answer. Full Marks is being awarded to all candidates.

Question Number : 169 Question Id : 7368155423 Question Type : MCQ Option Shuffling : Yes Display Question Number : Yes  
Single Line Question Option : No Option Orientation : Vertical

Correct : 1 Wrong : 0.25

The 'Madhubani' style of folk painting is originated in?

Options :

1. ✔ Bihar

2. ✘ West Bengal

3. ✘ Goa

4. ✘ Karnataka

Question Number : 169 Question Id : 7368155423 Question Type : MCQ Option Shuffling : Yes Display Question Number : Yes  
Single Line Question Option : No Option Orientation : Vertical

Correct : 1 Wrong : 0.25

लोक चित्रकारी की 'मधुबनी' शैली की शुरुआत कहां से हुई थी?

Options :

1. ✔ बिहार

2. ✘ पश्चिम बंगाल

3. ✘ गोवा

4. ✘ कर्नाटक

Question Number : 170 Question Id : 7368155424 Question Type : MCQ Option Shuffling : Yes Display Question Number : Yes  
Single Line Question Option : No Option Orientation : Vertical

Correct : 1 Wrong : 0.25

'Bhagyanagar' is the old name of which of the following Indian cities?

Options :

1. ✘ Mumbai

2. ✘ Patna

3. ✘ Bangalore

4. ✔ Hyderabad

Question Number : 170 Question Id : 7368155424 Question Type : MCQ Option Shuffling : Yes Display Question Number : Yes  
Single Line Question Option : No Option Orientation : Vertical

Correct : 1 Wrong : 0.25

निम्नलिखित में से 'भाग्य नगर' किस भारतीय शहर का पुराना नाम है?

Options :

1. ✘ मुंबई

2. ✘ पटना

3. ✘ बैंगलोर

4. ✔ हैदराबाद

Question Number : 171 Question Id : 7368155425 Question Type : MCQ Option Shuffling : Yes Display Question Number : Yes  
Single Line Question Option : No Option Orientation : Vertical

Correct : 1 Wrong : 0.25

Who among the following is considered as the first citizen and constitutional head of India?

Options :

1. ✘ Prime Minister

Latest Sarkari Jobs, Govt Exam Results,  
Vacancies and updates on one click

Know More

2. ✘ Chief Justice
3. ✔ President
4. ✘ Chief Army Commander

Question Number : 171 Question Id : 7368155425 Question Type : MCQ Option Shuffling : Yes Display Question Number : Yes  
Single Line Question Option : No Option Orientation : Vertical

Correct : 1 Wrong : 0.25

निम्नलिखित में से किसे, भारत का प्रथम नागरिक तथा संवैधानिक प्रधान माना जाता है?

Options :

1. ✘ प्रधानमंत्री
2. ✘ मुख्य न्यायाधीश
3. ✔ राष्ट्रपति
4. ✘ प्रमुख आर्मी कमांडर

Question Number : 172 Question Id : 7368155426 Question Type : MCQ Option Shuffling : Yes Display Question Number : Yes  
Single Line Question Option : No Option Orientation : Vertical

Correct : 1 Wrong : 0.25

To become a member of Lok Sabha, the minimum age required is

Options :

1. ✘ 30 years
2. ✔ 25 years
3. ✘ 35 years
4. ✘ 40 years

Question Number : 172 Question Id : 7368155426 Question Type : MCQ Option Shuffling : Yes Display Question Number : Yes  
Single Line Question Option : No Option Orientation : Vertical

Correct : 1 Wrong : 0.25

लोक सभा का सदस्य बनने के लिए न्यूनतम आयु कितनी है?

Options :

1. ✘ 30 वर्ष
2. ✔ 25 वर्ष
3. ✘ 35 वर्ष
4. ✘ 40 वर्ष

Question Number : 173 Question Id : 7368155427 Question Type : MCQ Option Shuffling : Yes Display Question Number : Yes  
Single Line Question Option : No Option Orientation : Vertical

Correct : 1 Wrong : 0.25

Who among the following audits all expenditure of Central and State Governments in India?

Options :

1. ✘ Reserve Bank of India
2. ✔ Comptroller and Auditor General
3. ✘ Planning Commission
4. ✘ National Development Council

Question Number : 173 Question Id : 7368155427 Question Type : MCQ Option Shuffling : Yes Display Question Number : Yes  
Single Line Question Option : No Option Orientation : Vertical

Correct : 1 Wrong : 0.25

निम्नलिखित में से कौन, भारत में केन्द्र एवं राज्य सरकार के सभी व्यय का ऑडिट करता है?

Options :

1. ✘ भारतीय रिजर्व बैंक
2. ✔ नियंत्रक एवं महालेखा परीक्षक
3. ✘ योजना आयोग
4. ✘ राष्ट्रीय विकास परिषद

Question Number : 174 Question Id : 7368155428 Question Type : MCQ Option Shuffling : Yes Display Question Number : Yes  
Single Line Question Option : No Option Orientation : Vertical

Correct : 1 Wrong : 0.25

The first Indian woman who received Bharat Ratna Award is

Options :

1. ✔ Indira Gandhi
2. ✘ Sarojini Naidu
3. ✘ Vijayalaxmi Pandit
4. ✘ Shakuntala Devi

Question Number : 174 Question Id : 7368155428 Question Type : MCQ Option Shuffling : Yes Display Question Number : Yes  
Single Line Question Option : No Option Orientation : Vertical

Correct : 1 Wrong : 0.25

भारत रत्न प्राप्त करने वाली प्रथम भारतीय महिला कौन हैं?

Options :

1. ✔ इंदिरा गांधी
2. ✘ सरोजिनी नायडू
3. ✘ विजयलक्ष्मी पंडित
4. ✘ शकुंतला देवी

Question Number : 175 Question Id : 7368155429 Question Type : MCQ Option Shuffling : Yes Display Question Number : Yes  
Single Line Question Option : No Option Orientation : Vertical

Correct : 1 Wrong : 0.25

Latest Sarkari Jobs, Govt Exam Results,  
Vacancies and updates on one click

Know More

Who appoints the members of State Public Service Commission?

Options :

1. ✘ High Court Judge
2. ✘ President
3. ✘ Chief Minister
4. ✔ Governor

Question Number : 175 Question Id : 7368155429 Question Type : MCQ Option Shuffling : Yes Display Question Number : Yes  
Single Line Question Option : No Option Orientation : Vertical

Correct : 1 Wrong : 0.25

राज्य लोक सेवा आयोग के सदस्यों की नियुक्ति कौन करता है?

Options :

1. ✘ उच्च न्यायालय के न्यायमूर्ति
2. ✘ राष्ट्रपति
3. ✘ मुख्यमंत्री
4. ✔ राज्यपाल

Question Number : 176 Question Id : 7368155430 Question Type : MCQ Option Shuffling : Yes Display Question Number : Yes  
Single Line Question Option : No Option Orientation : Vertical

Correct : 1 Wrong : 0.25

Who is the present director of Bhabha Atomic Research Centre?

Options :

1. ✔ Mansoor Ali
2. ✘ Devendra Rajput
3. ✘ Kasturi Rangan
4. ✘ Sekhar Basu

Note: For this question, discrepancy is found in question/answer. Full Marks is being awarded to all candidates.

Question Number : 176 Question Id : 7368155430 Question Type : MCQ Option Shuffling : Yes Display Question Number : Yes  
Single Line Question Option : No Option Orientation : Vertical

Correct : 1 Wrong : 0.25

भाभा परमाणु अनुसंधान केंद्र के वर्तमान निदेशक कौन हैं?

Options :

1. ✔ मंसूर अली
2. ✘ देवेन्द्र राजपूत
3. ✘ कस्तूरी रंगन
4. ✘ सेखर बसु

Note: For this question, discrepancy is found in question/answer. Full Marks is being awarded to all candidates.

Question Number : 177 Question Id : 7368155431 Question Type : MCQ Option Shuffling : Yes Display Question Number : Yes  
Single Line Question Option : No Option Orientation : Vertical

Correct : 1 Wrong : 0.25

Who is the present Chief Minister of Bihar?

Options :

1. ✘ Shatrughan Sinha
2. ✘ Lalu Prasad Yadav
3. ✔ Nitish Kumar
4. ✘ Jithan Ram Manjhi

Question Number : 177 Question Id : 7368155431 Question Type : MCQ Option Shuffling : Yes Display Question Number : Yes  
Single Line Question Option : No Option Orientation : Vertical

Correct : 1 Wrong : 0.25

बिहार का वर्तमान मुख्यमंत्री कौन है?

Options :

1. ✘ शत्रुघ्न सिन्हा
2. ✘ लालू प्रसाद यादव
3. ✔ नितीश कुमार
4. ✘ जीतन राम मांझी

Question Number : 178 Question Id : 7368155432 Question Type : MCQ Option Shuffling : Yes Display Question Number : Yes  
Single Line Question Option : No Option Orientation : Vertical

Correct : 1 Wrong : 0.25

Who is the present Captain of Indian National Test Cricket Team?

Options :

1. ✔ Virat Kohli
2. ✘ Mahendra Singh Dhoni
3. ✘ Yuvraj Singh
4. ✘ Suresh Raina

Question Number : 178 Question Id : 7368155432 Question Type : MCQ Option Shuffling : Yes Display Question Number : Yes  
Single Line Question Option : No Option Orientation : Vertical

Correct : 1 Wrong : 0.25

भारत के राष्ट्रीय टेस्ट क्रिकेट दल का वर्तमान कप्तान कौन है?

Options :

1. ✔ विराट कोहली
2. ✘ महेन्द्र सिंह धोनी
3. ✘ युवराज सिंह
4. ✘ सुरेश रैना



Question Number : 179 Question Id : 7368155433 Question Type : MCQ Option Shuffling : Yes Display Question Number : Yes  
Single Line Question Option : No Option Orientation : Vertical

Correct : 1 Wrong : 0.25

Where the Reserve Bank of India staff college is located?

Options :

1. ✘ New Delhi
2. ✔ Chennai
3. ✘ Bangalore
4. ✘ Kolkata

Question Number : 179 Question Id : 7368155433 Question Type : MCQ Option Shuffling : Yes Display Question Number : Yes  
Single Line Question Option : No Option Orientation : Vertical

Correct : 1 Wrong : 0.25

भारतीय रिजर्व बैंक कर्मचारी महाविद्यालय कहां पर स्थित है?

Options :

1. ✘ नई दिल्ली
2. ✔ चेन्नई
3. ✘ बेंगलोर
4. ✘ कोलकाता

Question Number : 180 Question Id : 7368155434 Question Type : MCQ Option Shuffling : Yes Display Question Number : Yes  
Single Line Question Option : No Option Orientation : Vertical

Correct : 1 Wrong : 0.25

Which one of the following is biggest commercial Bank in India?

Options :

1. ✔ State Bank of India
2. ✘ Axis Bank
3. ✘ ICICI bank
4. ✘ Oriental Bank of India

Question Number : 180 Question Id : 7368155434 Question Type : MCQ Option Shuffling : Yes Display Question Number : Yes  
Single Line Question Option : No Option Orientation : Vertical

Correct : 1 Wrong : 0.25

निम्नलिखित में से कौन सा भारत में सबसे विशाल वाणिज्यिक बैंक है?

Options :

1. ✔ भारतीय स्टेट बैंक
2. ✘ ऐक्सिस बैंक
3. ✘ आई.सी.आई.सी.आई. बैंक
4. ✘ ओरिएंटल बैंक ऑफ इंडिया

Question Number : 181 Question Id : 7368155435 Question Type : MCQ Option Shuffling : Yes Display Question Number : Yes  
Single Line Question Option : No Option Orientation : Vertical

Correct : 1 Wrong : 0.25

Which was the first private bank established in India?

Options :

1. ✘ Vysya Bank
2. ✔ UTI bank
3. ✘ Canara Bank
4. ✘ ICICI bank

Question Number : 181 Question Id : 7368155435 Question Type : MCQ Option Shuffling : Yes Display Question Number : Yes  
Single Line Question Option : No Option Orientation : Vertical

Correct : 1 Wrong : 0.25

भारत में स्थापित किया गया प्रथम निजी बैंक कौन सा था?

Options :

1. ✘ वैश्य बैंक
2. ✔ यू.टी.आई. बैंक
3. ✘ केनरा बैंक
4. ✘ आई.सी.आई.सी.आई. बैंक

Question Number : 182 Question Id : 7368155436 Question Type : MCQ Option Shuffling : Yes Display Question Number : Yes  
Single Line Question Option : No Option Orientation : Vertical

Correct : 1 Wrong : 0.25

Who among the following got Nobel Prize for studies on Economics?

Options :

1. ✔ Amartya Sen
2. ✘ Manmohan Singh
3. ✘ Chidambaram
4. ✘ Jaswanth Sinha

Question Number : 182 Question Id : 7368155436 Question Type : MCQ Option Shuffling : Yes Display Question Number : Yes  
Single Line Question Option : No Option Orientation : Vertical

Correct : 1 Wrong : 0.25

अर्थशास्त्र के अध्ययन के लिए निम्नलिखित में से किसे नोबेल पुरस्कार मिला है?

Options :

1. ✔ अमर्त्य सेन
2. ✘ मनमोहन सिंह
3. ✘ चिदम्बरम
4. ✘ जसवंत सिन्हा

Question Number : 183 Question Id : 7368155437 Question Type : MCQ Option Shuffling : Yes Display Question Number : Yes  
Single Line Question Option : No Option Orientation : Vertical

Correct : 1 Wrong : 0.25

In terms of Economics GDP stands for?

Options :

1. ✘ Great Demand Products
2. ✘ Gross Divisional Production
3. ✔ Gross Domestic Product
4. ✘ Guaranteed Domestic Production

Question Number : 183 Question Id : 7368155437 Question Type : MCQ Option Shuffling : Yes Display Question Number : Yes  
Single Line Question Option : No Option Orientation : Vertical

Correct : 1 Wrong : 0.25

अर्थशास्त्र के संदर्भ में 'जी.डी.पी.' शब्द का क्या अर्थ है?

Options :

1. ✘ अत्यधिक मांग उत्पाद (ग्रेड डिमांड प्रोडक्ट्स)
2. ✘ सकल प्रभागीय उत्पादन (ग्रॉस डिवीजनल प्रोडक्शन)
3. ✔ सकल घरेलू उत्पाद (ग्रॉस डॉमेस्टिक प्रोडक्ट)
4. ✘ सुनिश्चित घरेलू उत्पादन (गैरन्टीड डॉमेस्टिक प्रोडक्शन)

Question Number : 184 Question Id : 7368155438 Question Type : MCQ Option Shuffling : Yes Display Question Number : Yes  
Single Line Question Option : No Option Orientation : Vertical

Correct : 1 Wrong : 0.25

Which one of the following regulates the capital market and protects the interest of investors?

Options :

1. ✔ Securities and Exchange Board of India
2. ✘ Reserve Bank of India
3. ✘ National Development Council
4. ✘ Planning Commission

Question Number : 184 Question Id : 7368155438 Question Type : MCQ Option Shuffling : Yes Display Question Number : Yes  
Single Line Question Option : No Option Orientation : Vertical

Correct : 1 Wrong : 0.25

निम्नलिखित में कौन, पूंजी बाजार को विनियमित करता है तथा निवेशकों के हितों की सुरक्षा करता है?

Options :

1. ✔ भारतीय प्रतिभूति एवं विनियम बोर्ड
2. ✘ भारतीय रिजर्व बैंक
3. ✘ राष्ट्रीय विकास परिषद

#### 4. ✖ योजना आयोग

Question Number : 185 Question Id : 7368155439 Question Type : MCQ Option Shuffling : Yes Display Question Number : Yes  
Single Line Question Option : No Option Orientation : Vertical

Correct : 1 Wrong : 0.25

The EXIM bank which was established to regulate exports and imports in India was established in the year?

Options :

1. ✖ 1999
2. ✖ 1954
3. ✖ 1964
4. ✔ 1982

Question Number : 185 Question Id : 7368155439 Question Type : MCQ Option Shuffling : Yes Display Question Number : Yes  
Single Line Question Option : No Option Orientation : Vertical

Correct : 1 Wrong : 0.25

भारत में निर्यात एवं आयात को विनियमित करने के लिए स्थापित किए गए एक्जिम बैंक की स्थापना किस वर्ष में की गई थी?

Options :

1. ✖ 1999
2. ✖ 1954
3. ✖ 1964
4. ✔ 1982

Question Number : 186 Question Id : 7368155440 Question Type : MCQ Option Shuffling : Yes Display Question Number : Yes  
Single Line Question Option : No Option Orientation : Vertical

Correct : 1 Wrong : 0.25

The total number of Union territories in India is

Options :

1. ✔ 7
2. ✖ 5
3. ✖ 9
4. ✖ 6

Question Number : 186 Question Id : 7368155440 Question Type : MCQ Option Shuffling : Yes Display Question Number : Yes  
Single Line Question Option : No Option Orientation : Vertical

Correct : 1 Wrong : 0.25

भारतीय संविधान में कुल कितने केन्द्र शासित प्रदेश हैं?

Options :

1. ✔ 7
2. ✖ 5
3. ✖ 9

4. ✖ 6

Question Number : 187 Question Id : 7368155441 Question Type : MCQ Option Shuffling : Yes Display Question Number : Yes  
Single Line Question Option : No Option Orientation : Vertical

Correct : 1 Wrong : 0.25

The Indian State where the Sun rises first is

Options :

1. ✖ Nagaland
2. ✖ Punjab
3. ✖ Manipur
4. ✔ Arunachal Pradesh

Question Number : 187 Question Id : 7368155441 Question Type : MCQ Option Shuffling : Yes Display Question Number : Yes  
Single Line Question Option : No Option Orientation : Vertical

Correct : 1 Wrong : 0.25

निम्नलिखित में से भारत के किस राज्य में - सबसे पहले सूर्योदय होता है?

Options :

1. ✖ नागालैण्ड
2. ✖ पंजाब
3. ✖ मणिपुर
4. ✔ अरुणाचल प्रदेश

Question Number : 188 Question Id : 7368155442 Question Type : MCQ Option Shuffling : Yes Display Question Number : Yes  
Single Line Question Option : No Option Orientation : Vertical

Correct : 1 Wrong : 0.25

Which Indian city is known as 'Rose Pink City'?

Options :

1. ✔ Jaipur
2. ✖ Bhopal
3. ✖ Bangalore
4. ✖ Nagpur

Question Number : 188 Question Id : 7368155442 Question Type : MCQ Option Shuffling : Yes Display Question Number : Yes  
Single Line Question Option : No Option Orientation : Vertical

Correct : 1 Wrong : 0.25

किस भारतीय शहर को 'गुलाबी शहर' कहते हैं?

Options :

1. ✔ जयपुर
2. ✖ भोपाल
3. ✖ बैंगलोर

#### 4. ✖ नागपुर

Question Number : 189 Question Id : 7368155443 Question Type : MCQ Option Shuffling : Yes Display Question Number : Yes  
Single Line Question Option : No Option Orientation : Vertical

Correct : 1 Wrong : 0.25

The capital city of the Nagaland is?

Options :

1. ✖ Gangtok
2. ✔ Kohima
3. ✖ Itanagar
4. ✖ Imphal

Question Number : 189 Question Id : 7368155443 Question Type : MCQ Option Shuffling : Yes Display Question Number : Yes  
Single Line Question Option : No Option Orientation : Vertical

Correct : 1 Wrong : 0.25

कौन सा शहर नागालैण्ड की राजधानी है?

Options :

1. ✖ गंगटोक
2. ✔ कोहिमा
3. ✖ ईटानगर
4. ✖ इंफाल

Question Number : 190 Question Id : 7368155444 Question Type : MCQ Option Shuffling : Yes Display Question Number : Yes  
Single Line Question Option : No Option Orientation : Vertical

Correct : 1 Wrong : 0.25

On which river the Bhakra Nangal project is constructed?

Options :

1. ✔ Sutlej
2. ✖ Kaveri
3. ✖ Ganga
4. ✖ Yamuna

Question Number : 190 Question Id : 7368155444 Question Type : MCQ Option Shuffling : Yes Display Question Number : Yes  
Single Line Question Option : No Option Orientation : Vertical

Correct : 1 Wrong : 0.25

भाखड़ा नंगल परियोजना को किस नदी पर विनिर्मित किया गया था?

Options :

1. ✔ सतलज
2. ✖ कावेरी
3. ✖ गंगा

## 4. ✖ यमुना

Question Number : 191 Question Id : 7368155445 Question Type : MCQ Option Shuffling : Yes Display Question Number : Yes  
Single Line Question Option : No Option Orientation : Vertical

Correct : 1 Wrong : 0.25

The Indus valley civilization is also known as?

Options :

1. ✔ Harappan Civilization
2. ✖ Hind Civilization
3. ✖ Dravidan Civilization
4. ✖ Malvnakar Civilization

Question Number : 191 Question Id : 7368155445 Question Type : MCQ Option Shuffling : Yes Display Question Number : Yes  
Single Line Question Option : No Option Orientation : Vertical

Correct : 1 Wrong : 0.25

सिंधु घाटी की सभ्यता को और किस नाम से जाना जाता है?

Options :

1. ✔ हड़प्पन सभ्यता
2. ✖ हिंद सभ्यता
3. ✖ द्रविड़ सभ्यता
4. ✖ मालवंकर सभ्यता

Question Number : 192 Question Id : 7368155446 Question Type : MCQ Option Shuffling : Yes Display Question Number : Yes  
Single Line Question Option : No Option Orientation : Vertical

Correct : 1 Wrong : 0.25

Who is the founder of Chola Kingdom?

Options :

1. ✖ Simha Vishnu
2. ✖ Krishnadeva Raya
3. ✔ Vijayalaya
4. ✖ Vishnu Sharma

Question Number : 192 Question Id : 7368155446 Question Type : MCQ Option Shuffling : Yes Display Question Number : Yes  
Single Line Question Option : No Option Orientation : Vertical

Correct : 1 Wrong : 0.25

चोला राज्य के संस्थापक कौन थे?

Options :

1. ✖ सिम्हा विष्णु
2. ✖ कृष्णदेव राय
3. ✔ विजयालय

#### 4. ✖ विष्णु शर्मा

Question Number : 193 Question Id : 7368155447 Question Type : MCQ Option Shuffling : Yes Display Question Number : Yes  
Single Line Question Option : No Option Orientation : Vertical

Correct : 1 Wrong : 0.25

The 'Taj Mahal' was built on the banks of which river?

Options :

1. ✖ Kaveri
2. ✖ Sutlej
3. ✖ Ganga
4. ✔ Yamuna

Question Number : 193 Question Id : 7368155447 Question Type : MCQ Option Shuffling : Yes Display Question Number : Yes  
Single Line Question Option : No Option Orientation : Vertical

Correct : 1 Wrong : 0.25

'ताज महल' को किस नदी के तट पर निर्मित किया गया था?

Options :

1. ✖ कावेरी
2. ✖ सतलज
3. ✖ गंगा
4. ✔ यमुना

Question Number : 194 Question Id : 7368155448 Question Type : MCQ Option Shuffling : Yes Display Question Number : Yes  
Single Line Question Option : No Option Orientation : Vertical

Correct : 1 Wrong : 0.25

Who founded the Indian National Congress?

Options :

1. ✖ Jawaharlal Nehru
2. ✖ Mahatma Gandhi
3. ✔ A.O.Hume
4. ✖ Dadabhai Naoroji

Question Number : 194 Question Id : 7368155448 Question Type : MCQ Option Shuffling : Yes Display Question Number : Yes  
Single Line Question Option : No Option Orientation : Vertical

Correct : 1 Wrong : 0.25

भारतीय राष्ट्रीय कांग्रेस की स्थापना किसने की थी?

Options :

1. ✖ जवाहर लाल नेहरू
2. ✖ महात्मा गांधी
3. ✔ ए. ओ. ह्यूम



#### 4. ✖ दादाभाई नौरोजी

Question Number : 195 Question Id : 7368155449 Question Type : MCQ Option Shuffling : Yes Display Question Number : Yes  
Single Line Question Option : No Option Orientation : Vertical

Correct : 1 Wrong : 0.25

\_\_\_\_\_ is the slogan given by Mahatma Gandhi for Quit India Movement.

Options :

1. ✖ Purna Swaraj
2. ✔ Do or Die
3. ✖ Jai Hind
4. ✖ Swaraj is our birth right

Question Number : 195 Question Id : 7368155449 Question Type : MCQ Option Shuffling : Yes Display Question Number : Yes  
Single Line Question Option : No Option Orientation : Vertical

Correct : 1 Wrong : 0.25

भारत छोड़ो आन्दोलन के लिए महात्मा गांधी द्वारा दिया गया नारा कौन सा था?

Options :

1. ✖ पूर्ण स्वराज
2. ✔ करो या मरो
3. ✖ जय हिंद
4. ✖ स्वराज हमारा जन्मसिद्ध अधिकार है

Question Number : 196 Question Id : 7368155450 Question Type : MCQ Option Shuffling : Yes Display Question Number : Yes  
Single Line Question Option : No Option Orientation : Vertical

Correct : 1 Wrong : 0.25

Which Indian sports woman is known as the 'Payyoli Express'?

Options :

1. ✖ Sania Mirza
2. ✖ Saina Nehwal
3. ✔ P.T.Usha
4. ✖ Mithali Raj

Question Number : 196 Question Id : 7368155450 Question Type : MCQ Option Shuffling : Yes Display Question Number : Yes  
Single Line Question Option : No Option Orientation : Vertical

Correct : 1 Wrong : 0.25

किस भारतीय महिला खिलाड़ी को 'पायोली एक्सप्रेस' कहते हैं?

Options :

1. ✖ सानिया मिर्जा
2. ✖ साइना नेहवाल
3. ✔ पी.टी. ऊषा

#### 4. ✖ मिताली राज

Question Number : 197 Question Id : 7368155451 Question Type : MCQ Option Shuffling : Yes Display Question Number : Yes  
Single Line Question Option : No Option Orientation : Vertical

Correct : 1 Wrong : 0.25

Which Indian cricketer is known as 'The Wall'?

Options :

1. ✖ Sachin Tendulkar
2. ✔ Rahul Dravid
3. ✖ Virender Sehwag
4. ✖ Yuvraj Singh

Question Number : 197 Question Id : 7368155451 Question Type : MCQ Option Shuffling : Yes Display Question Number : Yes  
Single Line Question Option : No Option Orientation : Vertical

Correct : 1 Wrong : 0.25

किस भारतीय क्रिकेट खिलाड़ी को 'दि वॉल (दीवार)' कहते हैं?

Options :

1. ✖ सचिन तेन्दुलकर
2. ✔ राहुल द्रविड़
3. ✖ वीरेंद्र सहवाग
4. ✖ युवराज सिंह

Question Number : 198 Question Id : 7368155452 Question Type : MCQ Option Shuffling : Yes Display Question Number : Yes  
Single Line Question Option : No Option Orientation : Vertical

Correct : 1 Wrong : 0.25

How many times did Viswanathan Anand won the World Chess Championship?

Options :

1. ✔ 5 times
2. ✖ 10 times
3. ✖ 8 times
4. ✖ 12 times

Question Number : 198 Question Id : 7368155452 Question Type : MCQ Option Shuffling : Yes Display Question Number : Yes  
Single Line Question Option : No Option Orientation : Vertical

Correct : 1 Wrong : 0.25

विश्वनाथन आनंद ने कितनी बार विश्व शतरंज चैम्पियनशिप जीती है?

Options :

1. ✔ 5 बार
2. ✖ 10 बार
3. ✖ 8 बार

4. ✘ 12 बार

Question Number : 199 Question Id : 7368155453 Question Type : MCQ Option Shuffling : Yes Display Question Number : Yes  
Single Line Question Option : No Option Orientation : Vertical

Correct : 1 Wrong : 0.25

'Mother Teresa' is native of which of the following country?

Options :

1. ✔ Yugoslavia
2. ✘ United Kingdom
3. ✘ Italy
4. ✘ Spain

Question Number : 199 Question Id : 7368155453 Question Type : MCQ Option Shuffling : Yes Display Question Number : Yes  
Single Line Question Option : No Option Orientation : Vertical

Correct : 1 Wrong : 0.25

'मदर टेरेसा' मूल रूप से किस देश की निवासी थीं?

Options :

1. ✔ युगोस्लाविया
2. ✘ यूनाइटेड किंगडम
3. ✘ इटली
4. ✘ स्पेन

Question Number : 200 Question Id : 7368155454 Question Type : MCQ Option Shuffling : Yes Display Question Number : Yes  
Single Line Question Option : No Option Orientation : Vertical

Correct : 1 Wrong : 0.25

The slogan 'Jai Hind' was introduced by?

Options :

1. ✘ Bhagat Singh
2. ✔ Subhash Chandra Bose
3. ✘ Mahatma Gandhi
4. ✘ Jai Prakash Narayan

Question Number : 200 Question Id : 7368155454 Question Type : MCQ Option Shuffling : Yes Display Question Number : Yes  
Single Line Question Option : No Option Orientation : Vertical

Correct : 1 Wrong : 0.25

'जय हिंद' नारे का आरम्भ किसने किया था?

Options :

1. ✘ भगत सिंह
2. ✔ सुभाष चन्द्र बोस

3. ✖ महात्मा गांधी
4. ✖ जय प्रकाश नारायण

Prepp



# Latest Sarkari jobs, Govt Exam alerts, Results and Vacancies

- ▶ Latest News and Notification
- ▶ Exam Paper Analysis
- ▶ Topic-wise weightage
- ▶ Previous Year Papers with Answer Key
- ▶ Preparation Strategy & Subject-wise Books

To know more [Click Here](#)



[www.prepp.in](http://www.prepp.in)