

















Practice, Learn and Achieve
Your Goal with Prepp

SSC GD Exam

Previous Paper

Simplifying
Government Exams

 SSC CHSL	 IAS EXAM	 RRB NTPC	 NTSE	 CDS
 SSC CGL	 CBSE UGC NET	 IBPS PO	 NDA	
 SBI PO	 IBPS CLERK	 AFCAT	 SSC JE	 CTET
 CSIR UGC NET	 CAPF	 IBPS RRB		

Constable (GD) in CAPFs, NIA, SSF and Rifleman (GD) in Assam Rifles Examination, 2018

Exam Time :	12:30 PM - 2:00 PM
Exam Date :	13/02/2019

Section : General Section

Q.1 Choose the odd one out of the given options.

- Ans
- 1. GFR
 - 2. RST
 - 3. DHS
 - 4. NJG

Question ID : 9895804718
Chosen Option : 4

Q.2 Find out the two signs to be interchanged to make the following equation correct.

$$17 + 28 \times 4 - 5 \div 3 = 9$$

- Ans
- 1. - and \times
 - 2. - and \div
 - 3. \times and \div
 - 4. + and -

Question ID : 9895804735
Chosen Option : 2

Q.3 Select the option that is related to the third term in the same way as the second term is related to the first term.

Lock: Key::Horse: ?

- Ans
- 1. Ride
 - 2. Carriage
 - 3. Saucer
 - 4. Bull

Question ID : 9895804721
Chosen Option : 3

Q.4 Select the option that is related to the third term in the same way as the second term is related to the first term.

DFH: HLP:: EGI: ?

- Ans
- 1. JMP

- ✓ 2. JNR
- ✗ 3. JMR
- ✗ 4. JNP

Question ID : 9895804722
Chosen Option : 2

Q.5 Choose the odd one out of the given options.

- Ans
- ✗ 1. Ginger
 - ✗ 2. Onion
 - ✓ 3. Mustard
 - ✗ 4. Garlic

Question ID : 9895804719
Chosen Option : 3

Q.6 In a certain code, PENCIL is written as 59. How will ERASER be written in that code?

- Ans
- ✗ 1. 55
 - ✗ 2. 54
 - ✗ 3. 65
 - ✓ 4. 66

Question ID : 9895804724
Chosen Option : 3

Q.7 Choose the option in which the figure marked 'X' is embedded. (Rotation is not allowed)



- Ans
- ✗ 1.
 - ✗ 2.
 - ✗ 3.
 - ✓ 4.

Question ID : 9895804738

Q.8 Select the option that will correctly replace the question mark (?) in the series.

PKZ, NMX, LOV, JQT, ?

- Ans
- 1. ISO
 - 2. HTP
 - 3. HSR
 - 4. HST

Question ID : 9895804717
Chosen Option : 2

Q.9 The statements below are followed by two conclusions labeled I and II. Assuming that the information in the statements is true, even if it appears at variance with generally established facts, decide which conclusion(s) logically and definitely follow(s) from the information given in the statements.

Statements:

- 1) Some zoos are hangers.
- 2) Some hangers are fishes.

Conclusion

- I. Some zoos are fishes.
- II. Some hangers are zoos.

- Ans
- 1. Both conclusions follow.
 - 2. Only conclusion I follows.
 - 3. Only conclusion II follows.
 - 4. Neither conclusion I nor conclusion II follows.

Question ID : 9895804729
Chosen Option : 2

Q.1 Select the option that will correctly replace the question mark (?) in the given pattern.

13	23	?
3	4	6
39	92	66

- Ans
- 1. 7
 - 2. 13
 - 3. 9
 - 4. 11

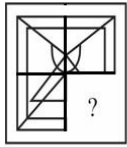
Question ID : 9895804734
Chosen Option : 3

Q.1 Choose the odd number out of the given numbers.

- Ans 1. 317
 2. 373
 3. 247
 4. 319

Question ID : 9895804733
 Chosen Option : 1

Q.1 Select a figure from amongst the four alternatives that when placed in the blank space (?) of figure X will complete the pattern. (Rotation is not allowed).



X

- Ans 1.
- 2.
- 3.
- 4.

Question ID : 9895804737
 Chosen Option : 3

Q.1 Choose the option that most closely resembles the mirror image of the given word when mirror is placed at right side.

3
 CLAMBER

- Ans 1. CLAMBER
2. REBWATC
3. REBWALC
4. REBWALC

Question ID : 9895804739
 Chosen Option : 4

Q.1 Seven friends O, P, Q, R, S, T and U are watching a movie sitting in a row. S is sitting at one extreme end. Q is sitting second to the right of S. P is sitting between O and Q. U is not sitting at any extreme end. R is sitting to the left of T. Who is sitting to the immediate left of P?

- Ans 1. O
 2. R
 3. Q

4. U

Question ID : 9895804725
Chosen Option : 2

Q.1 Select the option that is related to the third term in the same way as the second term is related to the first term.
5

Dissipate: Squander:: Alight : ?

- Ans 1. Prohibition
 2. Illusion
 3. Descend
 4. Scarcity

Question ID : 9895804720
Chosen Option : 4

Q.1 In a certain code, ENGINEER is written as REEINENG. How will PRODUCER be written in that code?
6

- Ans 1. RECDUORP
 2. RECDVPRO
 3. RECUDORP
 4. RECDUPRO

Question ID : 9895804723
Chosen Option : 1

Q.1 Select the option that will correctly replace the question mark (?) in the series.
7

10, 11, 19, 46, ?

- Ans 1. 110
 2. 77
 3. 105
 4. 82

Question ID : 9895804731
Chosen Option : 4

Q.1 Select the option that is related to the third number in the same way as the second number is related to the first number.
8

17: 289:: 23: ?

- Ans 1. 169
 2. 529
 3. 625
 4. 144

Question ID : 9895804732
Chosen Option : 3

Q.1
9

A square transparent sheet with a pattern is given. How will the pattern appear when the transparent sheet is folded along the dotted line?

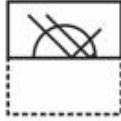


Ans

1.



2.



3.



4.




Question ID : 9895804740
Chosen Option : 2


Q.2 Select the Venn diagram that best represents the given set of classes.

Trivandrum, India, Kerala


Ans 1.




✗ 2.



✓ 3.



✗ 4.



Question ID : 9895804741
Chosen Option : 3

Q.2 Select the option that will correctly replace the question mark (?) in the series.

4, 20, 36, 52, ?

Ans ✓ 1. 68

2. 69

3. 70

4. 67

Question ID : 9895804730

Chosen Option : 1

Q.2 Eight friends A, B, C, D, E, F, G and H are sitting around a circular table facing each other for a lunch. A is opposite F and third to the right B. G is between F and D. H is to the left of D. E is between C and A. Who is sitting opposite E?

Ans 1. H

2. C

3. G

4. B

Question ID : 9895804726

Chosen Option : 1

Q.2 J, K, L, M, N and O are six teachers. Each one teaches a different subject out of Hindi, English, Math, Science, Social Science and Arts, not necessarily in the same order. Each of them teaches on only one day, from Monday to Saturday, not necessarily in the same order. J teaches Arts on Saturday. L teaches neither English nor Social Science, but he teaches on Thursday. Wednesday is reserved for Maths taught by K. O teaches Science a day before N. Social Science is taught a day before Arts. Which subject is taught on the first day of the week?

Ans 1. Science

2. Hindi

3. Arts

4. English

Question ID : 9895804727

Chosen Option : 4

Q.2 The statements below are followed by two conclusions labeled I and II. Assuming that the information in the statements is true, even if it appears at variance with generally established facts, decide which conclusion(s) logically and definitely follow(s) from the information given in the statements.

Statements:

1) All gypsies are webs.

2) All webs are nest.

Conclusion:

I. All nests are gypsies.

II. Some nests are gypsies.

Ans 1. Both conclusions follow.

2. Only conclusion II follows.

3. Only conclusion I follows.

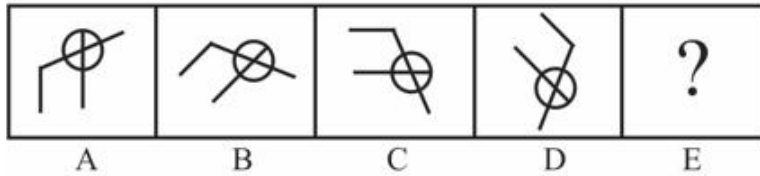
4. Either conclusion I or conclusion II follows.

Question ID : 9895804728

Chosen Option : 4

Q.2
5

Choose the option that would follow next in the given figure series.



Ans

- 1.
- 2.
- 3.
- 4.

Question ID : 9895804736
Chosen Option : 3

Q.2 Which of the following is NOT a folk dance form associated with Assam?

6

- Ans
- 1. Bihu
 - 2. Satriya Nritya
 - 3. Mandjas
 - 4. Bagurumba

Question ID : 9895802625
Chosen Option : 2

Q.2 Rohan Bopanna, the Arjuna Puraskar awardee of 2018, is known for accomplishments in which sport?

7

- Ans
- 1. Wrestling
 - 2. Tennis
 - 3. Para-badminton
 - 4. Shooting

Question ID : 9895802628
Chosen Option : 1

Q.2

8 Indian businessman and philanthropist Azim Premji was recently conferred Chevalier de la Legion d'Honneur. It is the highest civilian distinction of:

- Ans
- 1. Spain
 - 2. Britain
 - 3. Germany
 - 4. France

Question ID : 9895802631
Chosen Option : 4

Q.2
9 In any food chain, the top level is occupied by:

- Ans
- 1. lions
 - 2. human beings
 - 3. serpents
 - 4. eagle

Question ID : 9895802639
Chosen Option : 2

Q.3
0 Which of the following departments of the Government of India runs payments banks?

- Ans
- 1. Department of Accounting Affairs
 - 2. Department of Economic Affairs
 - 3. Department of Financial Inclusion
 - 4. Department of Posts

Question ID : 9895802633
Chosen Option : 2

Q.3
1 Which is the highest peak of Western Ghats?

- Ans
- 1. Anamudi
 - 2. Baba Budan Giri
 - 3. Dodda Betta
 - 4. Mahendragiri

Question ID : 9895802643
Chosen Option : 3

Q.3
2 Which of the following options is a harvest festival?

- Ans
- 1. Onam
 - 2. Akshaya Tritiya
 - 3. Dussehra
 - 4. Janmashtami

Question ID : 9895802624
Chosen Option : 2

Q.3
3 Who designed the Swaraj Flag during the Swadesi Movement in India?

- Ans
- 1. Abanindranath Tagore
 - 2. Rabindranath Tagore
 - 3. Bal Gangadhar Tilak
 - 4. Mahatma Gandhi

Question ID : 9895802648
Chosen Option : 4

Q.3
4 Who was the father of Sultana Raziya?

- Ans
- 1. Iltutmish
 - 2. Kaikubad
 - 3. Muhammad Tughluq
 - 4. Balban

Question ID : 9895802647
Chosen Option : 3

Q.3
5 Ramnath Goenka Awards are conferred for contributions in the field of:

- Ans
- 1. journalism
 - 2. women empowerment
 - 3. rural sanitation
 - 4. sports

Question ID : 9895802629
Chosen Option : 2

Q.3
6 The part of a leaf which connects it to the stem is called:

- Ans
- 1. vein
 - 2. stipules
 - 3. petiole
 - 4. lamina

Question ID : 9895802641
Chosen Option : 3

Q.3
7 Maulana Abul Kalam Azad (MAKA) Trophy is given by the Union Government to:

- Ans
- 1.

overall top performing university in inter-university tournaments

2. overall top performing state in national-level tournaments

3.

overall top performing athlete in international events organized in the year

4.

corporate entities who have played a visible role in the area of sports promotion and development

Question ID : 9895802627

Chosen Option : 1

Q.3
8 Which of the following is NOT a Neolithic cultural site?

Ans 1. Kuntasi

2. Mehrgarh

3. Burzahom

4. Koldihwa

Question ID : 9895802646

Chosen Option : 1

Q.3
9 Which of the following is a non-essential life process?

Ans 1. Communication

2. Nutrition

3. Reproduction

4. Excretion

Question ID : 9895802640

Chosen Option : 3

Q.4
0 Who was the Chairman of the Drafting Committee of the Constituent Assembly?

Ans 1. Rajendra Prasad

2. K.M. Munsi

3. Jawaharlal Nehru

4. B.R. Ambedkar

Question ID : 9895802637

Chosen Option : 4

Q.4
1 Which of the following statements is incorrect about hypermetropia?

Ans 1.

It may also arise because the focal length of the eye lens is too long.

2. The affected person cannot see nearby objects properly.

3. It is also known as far-sightedness.

4. Elongation of the eye ball is one of the causes of the defect.

Question ID : 9895802638
Chosen Option : 3

Q.4 In the Indian constitution, the power to legislate on the 'residual matters' has been assigned to:
2

- Ans
- 1. the Union Government
 - 2. the High Courts
 - 3. the State Governments
 - 4. the Supreme Court

Question ID : 9895802635
Chosen Option : 2

Q.4 Which of the following schemes is NOT among the Union Government's steps for financial inclusion?
3

- Ans
- 1. Pradhan Mantri Suraksha Bima Yojana
 - 2. Pradhan Mantri Jan Dhan Yojana
 - 3. Pradhan Mantri Jeevan Jyoti Bima Yojana
 - 4. Pradhan Mantri Ujjawala Yojana

Question ID : 9895802634
Chosen Option : 2

Q.4 Which of the following statements about gravitational force is NOT correct?
4

- Ans
- 1. It is inversely proportional to the square of the distance between the objects.
 - 2. It is inversely proportional to the product of the masses of the objects.
 - 3. Newton relied on the theories of Kepler in his research on the gravitational force.
 - 4. It is the force responsible for the attraction of every object of the universe towards each other.

Question ID : 9895802642
Chosen Option : 2

Q.4 Which of the following states has the highest population density?
5

- Ans
- 1. Bihar
 - 2. Tamil Nadu
 - 3. West Bengal
 - 4. Uttar Pradesh

Question ID : 9895802645
Chosen Option : 4

Q.4 Which of following sections o

6

- Ans
- 1. Federalism
 - 2. Citizenship
 - 3. Fundamental rights
 - 4. Scheduled languages

Question ID : 9895802636
Chosen Option : 3

Q.4
7 Who is the author of the book titled 'Becoming'?

- Ans
- 1. Therasa May
 - 2. Shashi Tharoor
 - 3. Milenia Trump
 - 4. Michelle Obama

Question ID : 9895802630
Chosen Option : 4

Q.4
8 Which of the following organizations publishes the World Development Report?

- Ans
- 1. IMF
 - 2. UNDP
 - 3. World Bank
 - 4. UNESCO

Question ID : 9895802632
Chosen Option : 3

Q.4
9 Which of the following rivers forms the famous Sivasamudram Falls?

- Ans
- 1. Tungabhadra
 - 2. Kaveri
 - 3. Kali Sind
 - 4. Krishna

Question ID : 9895802644
Chosen Option : 2

Q.5
0 Which of the following is NOT a world heritage site?

- Ans
- 1. Bhimbetka Rock Shelters
 - 2. Agra Fort
 - 3. Adamgarh Rock Shelters
 - 4. Ajanta Caves

Chosen Option : 1

Q.5 If the average of six consecutive even numbers is 11, then what will be the smallest number among them?

1

- Ans
- 1. 8
 - 2. 10
 - 3. 4
 - 4. 6

Question ID : 9895804363

Chosen Option : 4

Q.5 In a shop there are 60 articles. The average cost of 30 articles is ₹30 and the average cost of the remaining articles is

2

₹35. What is the average cost of all the articles together?

- Ans
- 1. ₹33.5
 - 2. ₹32.5
 - 3. ₹33
 - 4. ₹34

Question ID : 9895804362

Chosen Option : 1

Q.5 Curved surface area of a cylinder is 1056 cm^2 . If the height of cylinder is 8 cm, then what will be the diameter of its base?

3

- Ans
- 1. 14.5 cm
 - 2. 24.5 cm
 - 3. 42 cm
 - 4. 21 cm

Question ID : 9895804378

Chosen Option : 4

Q.5 The length breadth and height of a cuboid are in the ratio 5 : 4 : 2. If the volume of cuboid is 5000 cm^3 , then what will be the total surface area of the cuboid?

4

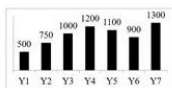
- Ans
- 1. 1800 cm^2
 - 2. 2100 cm^2
 - 3. 1750 cm^2
 - 4. 1900 cm^2

Question ID : 9895804379

Chosen Option : 2

Q.5 The bar chart given below shows the total exports (in ₹ 1000 crores) of a country for 7 consecutive years Y1, Y2, Y3, Y4, Y5, Y6 and Y7.

5



Which year shows the highest

- Ans 1. Y3
 2. Y5
 3. Y2
 4. Y4

Question ID : 9895804382
Chosen Option : 1

Q.5
6 What is the value of $528 - 24 \times \frac{4}{3}$ of $\frac{25}{7} \div \frac{1}{2}$?

- Ans 1. 2125/9
 2. 1920/7
 3. 2096/7
 4. 1926/7

Question ID : 9895804360
Chosen Option : 1

Q.5
7 Simple interest on a sum for 4 years is ₹ 24000 and the compound interest on the same sum at same rate of interest (interest is compounded annually) for 2 years is ₹ 12750. What is the rate of interest per annum?

- Ans 1. 20%
 2. 12.5%
 3. 18%
 4. 15%

Question ID : 9895804373
Chosen Option : 2

Q.5
8 A bag has white and yellow balls in the ratio 12 : 17 respectively. If the total number of balls is 116, then how many balls are yellow?

- Ans 1. 74
 2. 62
 3. 68
 4. 76

Question ID : 9895804370
Chosen Option : 3

Q.5
9 Marked price of a machine is 70% more than its cost price. If machine is sold at a profit of 44.5%, then what will be the discount percentage?

- Ans 1. 25%
 2. 17%
 3. 15%
 4. 20%

Question ID : 9895804364

Q.6 If Highest common Factor of two numbers is 12, then which of the following cannot be their Least Common Multiple?

0

- Ans
- 1. 48
 - 2. 80
 - 3. 60
 - 4. 24

Question ID : 9895804359
Chosen Option : 4

Q.6 Mohit and Sumit start a business with investment of ₹66000 and ₹84000 respectively. If at the end of the year they earn profit in the ratio of 11 : 9, then what will be ratio of the time period for which they invest their money?

1

- Ans
- 1. 9 : 11
 - 2. 33 : 42
 - 3. 7 : 11
 - 4. 14 : 9

Question ID : 9895804369
Chosen Option : 2

Q.6 If $p : q = 7 : 8$, then what will be $(p^2/q) : (q^2/p)$?

2

- Ans
- 1. 49 : 64
 - 2. 7 : 8
 - 3. 512 : 343
 - 4. 343 : 512

Question ID : 9895804371
Chosen Option : 2

Q.6 Cost price of first article is ₹480 and selling price of second article is ₹480. If there is a profit of 20% on first article and loss of 20% on second article, then what will be the total loss?

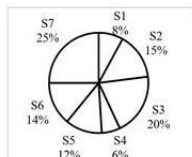
3

- Ans
- 1. ₹18
 - 2. ₹20
 - 3. No profit no loss
 - 4. ₹24

Question ID : 9895804368
Chosen Option : 3

Q.6 The pie chart given below shows the annual snowfall received by 7 states of a country. The snowfall is shown as a percentage of total annual snowfall of the country.

4



If the annual snowfall received by the country is 700 cm. What is the average annual snowfall of S2, S6 and S7?

Ans

- 1. Cannot be determined
- 2. 154 cm
- 3. 126 cm
- 4. 84 cm

Question ID : 9895804381
Chosen Option : 2

Q.6 Manoj covers two distances of 20 km and 36 km in 5 hours and 3 hours respectively. What will be the average speed of
5 Manoj for the whole journey?

- Ans 1. 7 km/hr
- 2. 8 km/hr
 - 3. 6 km/hr
 - 4. 5 km/hr

Question ID : 9895804377
Chosen Option : 2

Q.6 A sum of ₹10000 becomes ₹16000 at the rate of 15% per annum on simple interest in P years. What will be the value of
6 P ?

- Ans 1. 3 years
- 2. 6 years
 - 3. 5 years
 - 4. 4 years

Question ID : 9895804372
Chosen Option : 3

Q.6 18 workers can complete one-third of a work in 27 days. How many workers can complete the same whole work in 9
7 days?

- Ans 1. 128 days
- 2. 148 days
 - 3. 162 days
 - 4. 112 days

Question ID : 9895804374
Chosen Option : 4

Q.6 If cost price of an article is ₹1126 and loss is 22%, then what will be the net loss?
8

- Ans 1. ₹252.60
- 2. ₹232.20
 - 3. ₹247.72
 - 4. ₹260.52

Question ID : 9895804367

Q.6 A 420 metre long train is moving at the speed of 120 km/hr. How much time it will take to cross a 580 metres long platform?

- Ans
- 1. 45 seconds
 - 2. 48 seconds
 - 3. 30 seconds
 - 4. 40 seconds

Question ID : 9895804376
Chosen Option : 2

Q.7 Working 4 hours in a day, R can complete a work in 12 days and working 8 hours in a day, A can complete the same work in 9 days. Working 2 hours in a day, in how many days both R and A together can complete the same work?

- Ans
- 1. 36/5 days
 - 2. 72/5 days
 - 3. 48/5 days
 - 4. 72 days

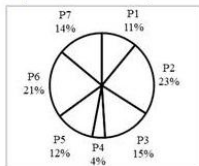
Question ID : 9895804375
Chosen Option : 4

Q.7 What is the value of $680 - 520 \div 5 - \frac{12}{13}$ of $\left(\frac{3}{4} + \frac{1}{3}\right)$?

- Ans
- 1. 574
 - 2. 577
 - 3. 575
 - 4. 571

Question ID : 9895804361
Chosen Option : 3

Q.7 The pie chart given below shows the imports of 7 different items P1, P2, P3, P4, P5, P6 and P7 as a percentage of total imports of a country.



If the total import of the country is ₹ 3000000, then how much is the import of item P6?

- Ans
- 1. 720000
 - 2. 450000
 - 3. 690000
 - 4. 630000

Question ID : 9895804383
Chosen Option : 2

Q.7 1400 boys and 900 girls gave an exam. If 52% boys and 68% girls pass in the exam, then what is the percentage of students who failed in the exam?

- Ans
- 1. 36.28%
 - 2. 63.72%
 - 3. 58.26%
 - 4. 41.74%

Question ID : 9895804365
Chosen Option : 2

Q.7 A number is increased by 40% and the resultant is decreased by 25%. What will be the total percentage increase?
4

- Ans
- 1. 10%
 - 2. 6%
 - 3. 5%
 - 4. 4%

Question ID : 9895804366
Chosen Option : 3

Q.7 The ratio of the areas of two triangles is 6 : 1 and the ratio of their bases is 3 : 2. What will be the ratio of their height?
5

- Ans
- 1. 5 : 1
 - 2. 2 : 1
 - 3. 4 : 1
 - 4. 2 : 3

Question ID : 9895804380
Chosen Option : 2

Section : English Language

Q.1 Select the most appropriate meaning of the given idiom.

At daggers drawn

- Ans
- 1. Being familiar
 - 2. Being irritated
 - 3. Being hostile
 - 4. Being friendly

Question ID : 9895804822
Chosen Option : 4

Q.2 Select the most appropriate ANTONYM of the given word.

SOGGY

- Ans
- 1. Cool
 - 2. Dry

3. Damp

4. Moist

Question ID : 9895804820
Chosen Option : 2

Comprehension:

In the following passage some words have been deleted. Fill in the blanks with the help of the alternatives given. Select the most appropriate option for each number.

There is an important aspect which (1) _____ a mention in any discussion of the future of Indian theatre. It is the (2) _____ development of the cinema as a competitor for (3) _____ among people. In (4) _____ early flush of cinematic triumph, the experts in the field (5) _____ the extinction of the theatre.

SubQuestion No : 3

Q.3 Fill in blank (1) with the most appropriate option.

Ans 1. deserves

2. involves

3. dictates

4. invites

Question ID : 9895804839
Chosen Option : 1

Comprehension:

In the following passage some words have been deleted. Fill in the blanks with the help of the alternatives given. Select the most appropriate option for each number.

There is an important aspect which (1) _____ a mention in any discussion of the future of Indian theatre. It is the (2) _____ development of the cinema as a competitor for (3) _____ among people. In (4) _____ early flush of cinematic triumph, the experts in the field (5) _____ the extinction of the theatre.

SubQuestion No : 4

Q.4 Fill in blank (2) with the most appropriate option.

Ans 1. express

2. hurried

3. prompt

4. rapid

Question ID : 9895804840
Chosen Option : 2

Comprehension:

In the following passage some words have been deleted. Fill in the blanks with the help of the alternatives given. Select the most appropriate option for each number.

There is an important aspect which (1) _____ a mention in any discussion of the future of Indian theatre. It is the (2) _____ development of the cinema as a competitor for (3) _____ among people. In (4) _____ early flush of cinematic triumph, the experts in the field (5) _____ the extinction of the theatre.

SubQuestion No : 5

Q.5 Fill in blank (3) with the most appropriate option.

Ans 1. demand

2. popularity

3. fame

4. choice

Question ID : 9895804841
Chosen Option : 2

Comprehension:

In the following passage some words have been deleted. Fill in the blanks with the help of the alternatives given. Select the most appropriate option for each number.

There is an important aspect which (1) _____ a mention in any discussion of the future of Indian theatre. It is the (2) _____ development of the cinema as a competitor for (3) _____ among people. In (4) _____ early flush of cinematic triumph, the experts in the field (5) _____ the extinction of the theatre.

SubQuestion No : 6

Q.6 Fill in blank (4) with the most appropriate option.

- Ans 1. a
 2. some
 3. the
 4. one

Question ID : 9895804842
Chosen Option : 3

Comprehension:

In the following passage some words have been deleted. Fill in the blanks with the help of the alternatives given. Select the most appropriate option for each number.

There is an important aspect which (1) _____ a mention in any discussion of the future of Indian theatre. It is the (2) _____ development of the cinema as a competitor for (3) _____ among people. In (4) _____ early flush of cinematic triumph, the experts in the field (5) _____ the extinction of the theatre.

SubQuestion No : 7

Q.7 Fill in blank (5) with the most appropriate option.

- Ans 1. calculated
 2. studied
 3. predicted
 4. regarded

Question ID : 9895804843
Chosen Option : 1

Q.8 Select the most appropriate word to fill in the blank.

He was vexed _____ the behaviour of his daughter.

- Ans 1. for
 2. with
 3. from
 4. on

Question ID : 9895804834
Chosen Option : 3

Q.9 Select the correctly spe

- Ans
- 1. immidiate
 - 2. immediate
 - 3. immigiate
 - 4. imediate

Question ID : 9895804825
Chosen Option : 3

Q.1
0 Select the most appropriate synonym of the given word.

GLOOMY

- Ans
- 1. Light
 - 2. Bright
 - 3. Painful
 - 4. Dull

Question ID : 9895804818
Chosen Option : 1

Q.1
1 Select the most appropriate word to fill in the blank.

He _____ himself from taking sugary foods.

- Ans
- 1. restricted
 - 2. resorted
 - 3. removed
 - 4. recovered

Question ID : 9895804828
Chosen Option : 2

Q.1
2 Select the most appropriate option to substitute the underlined segment in the given sentence. If there is no need to substitute it, select No improvement.

One can succeed in business unless one is prepared to take risks.

- Ans
- 1. One cannot hardly succeed
 - 2. No improvement
 - 3. No one cannot succeed
 - 4. One cannot succeed

Question ID : 9895804835
Chosen Option : 1

Q.1
3 Select the most appropriate option to substitute the underlined segment in the given sentence. If there is no need to substitute it, select No improvement.

I am not frightened of Shere Khan. He says that he is strong and cunning.

- Ans 1. but I know
 2. so I know
 3. in case I know
 4. No improvement

Question ID : 9895804836
Chosen Option : 3

Q.1
4 Select the most appropriate synonym of the given word.

MENACE

- Ans 1. Help
 2. Harassment
 3. Delight
 4. Nuisance

Question ID : 9895804819
Chosen Option : 1

Q.1
5 Identify the segment in the sentence which contains the grammatical error from the given options.

Today we are closer to reaching an agreement that we were a few months ago.

- Ans 1. to reaching
 2. a few months ago
 3. we are closer
 4. that we were

Question ID : 9895804831
Chosen Option : 4

Q.1
6 Select the most appropriate word to fill in the blank.

Owing to the heavy rains the office building was badly _____.

- Ans 1. damaging
 2. damaged
 3. damages
 4. damage

Question ID : 9895804833
Chosen Option : 4

Q.1
7 Select the most appropriate ANTONYM of the given word.

MISERABLE

- Ans 1. Cheerful

2. Hopeless

3. Lonely

4. Miserly

Question ID : 9895804821

Chosen Option : 4

Q.1 Select the most appropriate option to substitute the underlined segment in the given sentence. If there is no need to substitute it, select No improvement.

8

By seeing the cameras the villagers were convinced that the tourists intended to take photographs.

Ans 1. Seen the cameras

2. Saw a camera

3. No improvement

4. Seeing the cameras

Question ID : 9895804837

Chosen Option : 4

Q.1 Identify the segment in the sentence which contains the grammatical error from the given options.

9

We have to check the records to find out how much cheques have been collected so far.

Ans 1. have to check

2. to find out

3. much cheques

4. have been collected

Question ID : 9895804830

Chosen Option : 4

Q.2 Select the most appropriate meaning of the given idiom.

0

Once in a blue moon

Ans 1. Frequently

2. Usually

3. Never

4. Rarely

Question ID : 9895804823

Chosen Option : 3

Q.2 Select the most appropriate word to fill in the blank.

1

While walking on the beach we _____ seashells.

Ans 1. increased

2. assembled

- 3. needed
- 4. collected

Question ID : 9895804829
Chosen Option : 3

Q.2
2 Select the word which means the same as the group of words given.

A person who eats too much

- Ans
- 1. Liberal
 - 2. Greedy
 - 3. Glutton
 - 4. Obese

Question ID : 9895804826
Chosen Option : 3

Q.2
3 Select the word which means the same as the group of words given.

That which cannot be conquered

- Ans
- 1. Incapable
 - 2. Invisible
 - 3. Invincible
 - 4. Inevitable

Question ID : 9895804827
Chosen Option : 2

Q.2
4 Select the correctly spelt word.

- Ans
- 1. Beggar
 - 2. Begger
 - 3. Baggar
 - 4. Bagger

Question ID : 9895804824
Chosen Option : 2

Q.2
5 Identify the segment in the sentence which contains the grammatical error from the given options.

We must realize that learning from mistakes are an important part of life.

- Ans
- 1. mistakes are
 - 2. that learning from
 - 3. We must realize
 - 4. part of life

Section : Hindi Language

Q.1 दिए गए वाक्य का वह भाग ज्ञात करें जिसमें कोई त्रुटि है।

आज दुर्भाग्य से शिक्षण संस्थाओं पर अनुशासनहीनता का आधिक्य है।

- Ans
- 1. आधिक्य है।
 - 2. अनुशासनहीनता का
 - 3. आज दुर्भाग्य से
 - 4. शिक्षण संस्थाओं पर

Comprehension:

निम्नलिखित गद्यांश के रिक्त स्थानों की पूर्ति गद्यांश के नीचे दिए गए प्रश्नों के अनुसार कीजिए -

_____ (1) अनमोल धन है। इसकी _____ (2) किसी से भी नहीं की जा सकती। हीरे _____ (3) या सोने-चाँदी से भी नहीं। सच्ची मित्रता में किसी कारण से _____ (4) नहीं आ सकता। बाइबिल में कहा गया है कि एक सच्चा मित्र विश्व की _____ (5) दवा है।

SubQuestion No : 2

Q.2 गद्यांश में संकेतित रिक्त स्थान (1) के लिए उपयुक्त शब्द होगा-

- Ans
- 1. मित्रता
 - 2. बहनापा
 - 3. शिशुता
 - 4. भाईचारा

Comprehension:

निम्नलिखित गद्यांश के रिक्त स्थानों की पूर्ति गद्यांश के नीचे दिए गए प्रश्नों के अनुसार कीजिए -

_____ (1) अनमोल धन है। इसकी _____ (2) किसी से भी नहीं की जा सकती। हीरे _____ (3) या सोने-चाँदी से भी नहीं। सच्ची मित्रता में किसी कारण से _____ (4) नहीं आ सकता। बाइबिल में कहा गया है कि एक सच्चा मित्र विश्व की _____ (5) दवा है।

SubQuestion No : 3

Q.3 गद्यांश में संकेतित रिक्त स्थान (2) के लिए उपयुक्त शब्द होगा-

- Ans
- 1. अपेक्षा
 - 2. उपेक्षा
 - 3. तुलना
 - 4. बड़ाई

Question ID : 9895803786
Chosen Option : --

Comprehension:

निम्नलिखित गद्यांश के रिक्त स्थानों की पूर्ति गद्यांश के नीचे दिए गए प्रश्नों के अनुसार कीजिए -

_____ (1) अनमोल धन है। इसकी _____ (2) किसी से भी नहीं की जा सकती। हीरे _____ (3) या सोने-चाँदी से भी नहीं। सच्ची मित्रता में किसी कारण से _____ (4) नहीं आ सकता। बाइबिल में कहा गया है कि एक सच्चा मित्र विश्व की _____ (5) दवा है।

SubQuestion No : 4

Q.4 गद्यांश में संकेतित रिक्त स्थान (3) के लिए उपयुक्त शब्द होगा

- Ans
- 1. मोती
 - 2. रत्न
 - 3. रूपा
 - 4. लाल

Question ID : 9895803787
Chosen Option : --

Comprehension:

निम्नलिखित गद्यांश के रिक्त स्थानों की पूर्ति गद्यांश के नीचे दिए गए प्रश्नों के अनुसार कीजिए -

_____ (1) अनमोल धन है। इसकी _____ (2) किसी से भी नहीं की जा सकती। हीरे _____ (3) या सोने-चाँदी से भी नहीं। सच्ची मित्रता में किसी कारण से _____ (4) नहीं आ सकता। बाइबिल में कहा गया है कि एक सच्चा मित्र विश्व की _____ (5) दवा है।

SubQuestion No : 5

Q.5 गद्यांश में संकेतित रिक्त स्थान (4) के लिए उपयुक्त शब्द होगा

- Ans
- 1. हस्तक्षेप
 - 2. व्यवधान
 - 3. दखल
 - 4. अपरिहार्य

Question ID : 9895803788

Chosen Option : --

Comprehension:

निम्नलिखित गद्यांश के रिक्त स्थानों की पूर्ति गद्यांश के नीचे दिए गए प्रश्नों के अनुसार कीजिए -

_____ (1) अनमोल धन है। इसकी _____ (2) किसी से भी नहीं की जा सकती। हीरे _____ (3) या सोने-चाँदी से भी नहीं। सच्ची मित्रता में किसी कारण से _____ (4) नहीं आ सकता। बाइबिल में कहा गया है कि एक सच्चा मित्र विश्व की _____ (5) दवा है।

SubQuestion No : 6

Q.6 गद्यांश में संकेतित रिक्त स्थान (5) के लिए उपयुक्त शब्द होगा

- Ans
- 1. हीन
 - 2. सर्वश्रेष्ठ
 - 3. साधारण
 - 4. अधम

Question ID : 9895803789

Chosen Option : --

Q.7 दिए गए वाक्य में रेखांकित खंड को प्रतिस्थापित करने के लिए उपयुक्त विकल्प का चयन करें।

अपने कार्य को अपने आप करना ही स्वावलंबन कहलाती है।

- Ans
- 1. स्वावलंबन कहलाते हैं।
 - 2. स्वावलंबन

✗ 3. स्वावलंबी कहलाता हैं।

✗ 4. स्वावलंबन कहलाता है।

Question ID : 9895803777
Chosen Option : --

Q.8 दिए गए वाक्य में रेखांकित खंड को प्रतिस्थापित करने के लिए उपयुक्त विकल्प का चयन करें।

मजदूर ने चटनी की रोटी खाई और काम पर चला गया।

Ans

✗ 1. मजदूर ने चटनी से रोटी खाई

✗ 2. मजदूर ने रोटी के चटनी खाई

✗ 3. मजदूर ने रोटी को चटनी खाई

✓ 4. मजदूर ने रोटी का चटनी खाई

Question ID : 9895803779
Chosen Option : --

Q.9 दिए गए शब्द का विलोम चुनें।

विस्तृत

Ans

✗ 1. अधम

✗ 2. दीर्घ

✗ 3. संक्षिप्त

✓ 4. अवर

Question ID : 9895803791
Chosen Option : --

Q.1₀ दिए गए शब्द के पर्यायवाची शब्द का चयन करें।

अभ्युदय

Ans

✗ 1. अवनति

✗ 2. इच्छा

✗ 3. आकांक्षा

✓ 4. उन्नति

Question ID : 9895803792
Chosen Option : --

Q.1₁ दिए गए वाक्य का वह भाग ज्ञात करें जिसमें कोई त्रुटि है।

मानव जाति अपने

- Ans
- 1. श्रेष्ठ और सभ्य होने का
 - 2. दावा करती है।
 - 3. मानव जाति
 - 4. अपने को पशुओं का

Question ID : 9895803774
Chosen Option : --

Q.1
2 सही वर्तनी वाले शब्द का चयन करें।

- Ans
- 1. निरामिश
 - 2. निरामिष
 - 3. निरामईष
 - 4. नीरामिष

Question ID : 9895803798
Chosen Option : --

Q.1
3 दिए गए वाक्य का वह भाग ज्ञात करें जिसमें कोई त्रुटि है।

संतों को जीवन परोपकार के लिए होता है।

- Ans
- 1. जीवन
 - 2. होता है।
 - 3. परोपकार के लिए
 - 4. संतों को

Question ID : 9895803775
Chosen Option : --

Q.1
4 रिक्त स्थान को भरने के लिए उपयुक्त शब्द का चयन करें।

राम ने रावण से _____ किया।

- Ans
- 1. ईर्ष्या
 - 2. भेदभाव
 - 3. युद्ध
 - 4. समझौता

Question ID : 9895803783
Chosen Option : --

Q.1

5 रिक्त स्थान को भरने के लिए उपयुक्त शब्द का चयन करें।

योद्धा ने बहादुरी के साथ _____ की।

- Ans
- 1. पढ़ाई
 - 2. लिखाई
 - 3. लड़ाई
 - 4. रुलाई

Question ID : 9895803781
Chosen Option : --

Q.1 6 दिये गये वाक्यांश के लिए एक शब्द दीजिये।

परोपकार करने वाला

- Ans
- 1. कृतघ्न
 - 2. कृतज्ञ
 - 3. परोपकारी
 - 4. सहकारी

Question ID : 9895803797
Chosen Option : --

Q.1 7 दिए गए शब्द के पर्यायवाची शब्द का चयन करें।

प्रकृति

- Ans
- 1. हरियाली
 - 2. कुदरत
 - 3. सृष्टि
 - 4. संसार

Question ID : 9895803793
Chosen Option : --

Q.1 8 दिये गये वाक्यांश के लिए एक शब्द दीजिये।

साथ चलने वाला

- Ans
- 1. प्रतिगामी
 - 2. सहयोगी
 - 3. सहगामी

✗ 4. सहयोग

Question ID : 9895803796
Chosen Option : --

Q.1 निम्नलिखित में से उस विकल्प का चयन करें जो 'चेहरे पर हवाइयाँ उड़ना' मुहावरे का अर्थ व्यक्त करता है।

Ans

- ✓ 1. प्रसन्न होना
✗ 2. चेहरे पर हवा लगना
✗ 3. निश्चिंत होना
✗ 4. घबरा जाना

Question ID : 9895803795
Chosen Option : --

Q.2 रिक्त स्थान को भरने के लिए उपयुक्त शब्द का चयन करें।

साहिल को पाँच _____ दूध चाहिए।

Ans

- ✗ 1. मीटर
✓ 2. लीटर
✗ 3. किलो
✗ 4. दर्जन

Question ID : 9895803780
Chosen Option : --

Q.2 दिए गए वाक्य में रेखांकित खंड को प्रतिस्थापित करने के लिए उपयुक्त विकल्प का चयन करें।

जीवन अवसरों में एक धारा है।

Ans

- ✗ 1. अवसरों का एक धारा
✗ 2. अवसरों के एक धारा
✓ 3. अवसरों पर धारा
✗ 4. अवसरों की एक धारा

Question ID : 9895803778
Chosen Option : --

Q.2 दिए गए शब्द का विलोम चुनें।

कनिष्ठ

Ans

- ✗ 1. सहायक
✓ 2. वरिष्ठ
✗ 3. अनुदार

✗ 4. सहकर्मी

Question ID : 9895803790
Chosen Option : --

Q.2
3 रिक्त स्थान को भरने के लिए उपयुक्त शब्द का चयन करें।

नेता ने बहुत ही बढ़िया _____ दिया।

- Ans
- ✗ 1. वाद-विवाद
 - ✗ 2. प्रवचन
 - ✗ 3. आख्यान
 - ✓ 4. भाषण

Question ID : 9895803782
Chosen Option : --

Q.2
4 सही वर्तनी वाले शब्द का चयन करें।

- Ans
- ✓ 1. नीराकार
 - ✗ 2. निराकार
 - ✗ 3. निरकार
 - ✗ 4. निर्कार

Question ID : 9895803799
Chosen Option : --

Q.2
5 निम्नलिखित में से उस विकल्प का चयन करें जो 'एक ही थैली के चढ़े-बढ़े' मुहावरे का अर्थ व्यक्त करता है।

- Ans
- ✓ 1. एक जैसे लोग
 - ✗ 2. एक थैले में चढ़े और बढ़े रखना
 - ✗ 3. एक ही नाम वाले लोग
 - ✗ 4. एक शकल के लोग

Question ID : 9895803794
Chosen Option : --



Latest Sarkari jobs, Govt Exam alerts, Results and Vacancies

- ▶ Latest News and Notification
- ▶ Exam Paper Analysis
- ▶ Topic-wise weightage
- ▶ Previous Year Papers with Answer Key
- ▶ Preparation Strategy & Subject-wise Books

To know more [Click Here](#)



www.prepp.in