



Practice, Learn and Achieve  
Your Goal with Prepp

# SSC CHSL Exam

Tier I Previous Paper

Simplifying  
Government Exams

 SSC CHSL	 IAS EXAM	 RRB NTPC	 NTSE	 CDS
 SSC CGL	 CBSE UGC NET	 IBPS PO	 NDA	
 SBI PO	 IBPS CLERK	 AFCAT	 SSC JE	 CTET
 CSIR UGC NET	 CAPF	 IBPS RRB		

# Combined Higher Secondary Level Examination 2019 Tier I

Roll Number	
Candidate Name	
Venue Name	
Exam Date	21/10/2020
Exam Time	4:00 PM - 5:00 PM
Subject	CHSL Tier 1

Section : English Language (Basic Knowledge)

Q.1 Select the most appropriate word to fill in the blank:

As part of the \_\_\_\_\_ Classical Indian Music Festival leading vocalists and instrumentalists are taking the stage this evening.

- Ans
- 1. postponed
  - 2. foregone
  - 3. onset
  - 4. ongoing

Question ID : 4244291541  
Status : Answered  
Chosen Option : 4

Q.2 Select the most appropriate meaning of the given idiom:

Under the weather

- Ans
- 1. To face bad weather conditions
  - 2. To feel wronged by friends
  - 3. Feel strong and energetic
  - 4. To be in low spirits

Question ID : 4244291533  
Status : Answered  
Chosen Option : 4

Q.3 Select the correct Indirect form of the given sentence.

"Let's sit out in the sun," Anya said.

- Ans
- 1. Anya is suggesting that we sit out in the sun.
  - 2. Anya had suggested that we sit out in the sun.
  - 3. Anya suggested that we sit out in the sun.
  - 4. Anya was suggesting that we sit out in the sun.

Question ID : 4244291518  
Status : Answered  
Chosen Option : 3

**Q.4 Select the most appropriate synonym of the given word:**

**ALTRUIST**

- Ans
- 1. Individualist
  - 2. Philanthropist
  - 3. Nutritionist
  - 4. Impressionist

Question ID : 4244291540  
Status : Answered  
Chosen Option : 2

**Comprehension:**

In the following passage some words have been deleted. Fill in the blanks with the help of the alternatives given. Select the most appropriate option for each blank.

Jonas Karlsson and Ruth Osborne are two chefs who (1)\_\_\_\_\_ about promoting zero waste in cooking, whether it is (2)\_\_\_\_\_ restaurants or at home. It means using every part of a food (3)\_\_\_\_\_. So for example, you needn't peel carrots. You can (4)\_\_\_\_\_ scrub off the surface lightly and cook them You can also find ways (5)\_\_\_\_\_ and recycle by- products like using coffee grounds to make biscuits.

**SubQuestion No : 5**

**Q.5 Select the most appropriate option for blank No. 1.**

- Ans
- 1. are passionately
  - 2. was passionate
  - 3. are passionate
  - 4. were passionate

Question ID : 4244291522  
Status : Answered  
Chosen Option : 3

**Comprehension:**

In the following passage some words have been deleted. Fill in the blanks with the help of the alternatives given. Select the most appropriate option for each blank.

Jonas Karlsson and Ruth Osborne are two chefs who (1)\_\_\_\_\_ about promoting zero waste in cooking, whether it is (2)\_\_\_\_\_ restaurants or at home. It means using every part of a food (3)\_\_\_\_\_. So for example, you needn't peel carrots. You can (4)\_\_\_\_\_ scrub off the surface lightly and cook them You can also find ways (5)\_\_\_\_\_ and recycle by- products like using coffee grounds to make biscuits.

**SubQuestion No : 6**

**Q.6 Select the most appropriate option for blank No. 2.**

- Ans
- 1. upon
  - 2. in
  - 3. into
  - 4. on

Question ID : 4244291523  
Status : Answered  
Chosen Option : 2

**Comprehension:**

In the following passage some words have been deleted. Fill in the blanks with the help of the alternatives given. Select the most appropriate option for each blank.

Jonas Karlsson and Ruth Osborne are two chefs who (1)\_\_\_\_\_ about promoting zero waste in cooking, whether it is (2)\_\_\_\_\_ restaurants or at home. It means using every part of a food (3)\_\_\_\_\_. So for example, you needn't peel carrots. You can (4)\_\_\_\_\_ scrub off the surface lightly and cook them You can also find ways (5)\_\_\_\_\_ and recycle by- products like using coffee grounds to make biscuits.

**SubQuestion No : 7**

**Q.7 Select the most appropriate option for blank No. 3.**

- Ans
- 1. production
  - 2. product
  - 3. productive
  - 4. producer

Question ID : 4244291524

Status : Answered

Chosen Option : 3

**Comprehension:**

In the following passage some words have been deleted. Fill in the blanks with the help of the alternatives given. Select the most appropriate option for each blank.

Jonas Karlsson and Ruth Osborne are two chefs who (1)\_\_\_\_\_ about promoting zero waste in cooking, whether it is (2)\_\_\_\_\_ restaurants or at home. It means using every part of a food (3)\_\_\_\_\_. So for example, you needn't peel carrots. You can (4)\_\_\_\_\_ scrub off the surface lightly and cook them You can also find ways (5)\_\_\_\_\_ and recycle by- products like using coffee grounds to make biscuits.

**SubQuestion No : 8**

**Q.8 Select the most appropriate option for blank No. 4.**

- Ans
- 1. just
  - 2. rarely
  - 3. seldom
  - 4. never

Question ID : 4244291525

Status : Answered

Chosen Option : 1

**Comprehension:**

In the following passage some words have been deleted. Fill in the blanks with the help of the alternatives given. Select the most appropriate option for each blank.

Jonas Karlsson and Ruth Osborne are two chefs who (1)\_\_\_\_\_ about promoting zero waste in cooking, whether it is (2)\_\_\_\_\_ restaurants or at home. It means using every part of a food (3)\_\_\_\_\_. So for example, you needn't peel carrots. You can (4)\_\_\_\_\_ scrub off the surface lightly and cook them You can also find ways (5)\_\_\_\_\_ and recycle by- products like using coffee grounds to make biscuits.

**SubQuestion No : 9**

**Q.9 Select the most appropriate option for blank No. 5.**

- Ans
- 1. to redo
  - 2. to reuse
  - 3. to redone
  - 4. to reused

Question ID : 4244291526

Status : Answered

Chosen Option : 2

**Q.10 Select the most appropriate option to substitute the underlined segment in the given sentence. If there is no need to substitute it, select No improvement.**

I think you'd better paid online immediately as you may not get time to visit the bank later on during the day.

- Ans
- 1. you'd better pay
  - 2. No Improvement
  - 3. you'd better paying
  - 4. you'd have better pay

Question ID : 4244291529

Status : Not Attempted and Marked For Review

Chosen Option : --

**Q.11 Select the most appropriate antonym of the given word:**

**COARSE**

- Ans
- 1. Common
  - 2. Colourful
  - 3. Refined
  - 4. Vulgar

Question ID : 4244291532

Status : Answered

Chosen Option : 4

Q.12 Select the word which means the same as the group of words given:

A part of the city especially the slum area

- Ans
- 1. Ghetto
  - 2. Metropolis
  - 3. Suburb
  - 4. Colony

Question ID : 4244291537  
Status : Answered  
Chosen Option : 4

Q.13 Select the correct passive form of the given sentence.

The vet told me to put eye drops and ointment in my pet's eyes.

- Ans
- 1. I had been told by the vet to put eye drops and ointment in my pet's eyes.
  - 2. I am being told by the vet to put eye drops and ointment in my pet's eyes.
  - 3. I was told by the vet to put eye drops and ointment in my pet's eyes.
  - 4. I was being told by the vet to put eye drops and ointment in my pet's eyes.

Question ID : 4244291517  
Status : Answered  
Chosen Option : 3

Q.14 Select the most appropriate meaning of the given idiom:

The straw that broke the camel's back

- Ans
- 1. To show strength and continue without a fuss
  - 2. To be the last in a series of events leading one to feel that it is intolerable
  - 3. To undertake a difficult journey across a desert
  - 4. To make a wish for an escape from existing conditions

Question ID : 4244291534  
Status : Answered  
Chosen Option : 2

Q.15 Select the wrongly spelt word.

- Ans
- 1. Privilige
  - 2. Mileage
  - 3. Gait
  - 4. Truism

Question ID : 4244291536  
Status : Answered  
Chosen Option : 1

Q.16 Select the most appropriate antonym of the given word:

CONTEMPLATE

- Ans
- 1. Deify
  - 2. Conceive
  - 3. Ignore
  - 4. Meditate

Question ID : 4244291531  
Status : Answered  
Chosen Option : 4

Q.17 Select the word which means the same as the group of words given:

Making one feel very sad

- Ans
- 1. Heart-to-heart
  - 2. Heart-searching
  - 3. Heart-stopping
  - 4. Heart-wrenching

Question ID : 4244291538  
Status : Answered  
Chosen Option : 4

Q.18 Given below are four jumbled sentences. Pick the option that gives their correct order.

- A. At the onset of his journey, his mother guides him how to survive and navigate the world.
- B. 'Silo's Journey' is a film made by a wildlife film director.
- C. It follows the journey of a young reindeer's first year at close range.
- D. Sharing this journey is his friend-a curious red-haired squirrel.

- Ans
- 1. BDCA
  - 2. BCAD
  - 3. CABD
  - 4. DABC

Question ID : 4244291527  
Status : Answered  
Chosen Option : 2

Q.19 In the sentence identify the segment which contains the grammatical error.

Firecrackers have seized by the government went off while being defused on the banks of the river Ganga, in a town in West Bengal.

- Ans
- 1. while being defused
  - 2. on the banks of the river Ganga
  - 3. Firecrackers have seized by the government
  - 4. in a town in West Bengal

Question ID : 4244291519  
Status : Answered

Q.20 In the sentence identify the segment which contains the grammatical error.

A 12 year old archer was airlifted to Delhi when he met with an accident while practice for the Khelo India Games in Guwahati.

- Ans
- 1. was airlifted to Delhi
  - 2. when he met with an accident
  - 3. A 12 year old archer
  - 4. while practice for the Khelo India Games

Question ID : 4244291520  
Status : Answered  
Chosen Option : 4

Q.21 Select the most appropriate word to fill in the blank.

Prince Harry and his wife, Megan Markle announced their decision to \_\_\_\_\_ from their role as senior royals by leaving United Kingdom and limiting their royal commitments.

- Ans
- 1. step up
  - 2. step on
  - 3. step in
  - 4. step back

Question ID : 4244291542  
Status : Answered  
Chosen Option : 2

Q.22 Given below are four jumbled sentences. Pick the option that gives their correct order.

- A. Soon a special friendship develops between the two girls in war torn Syria.
- B. While at her grandmother's place, Suzan meets Rana, a Syrian girl, who lives in a nearby refugee camp.
- C. 'Summer with Rana' is a film by Sanne Vogel, who began her film career as early as 17.
- D. Her film revolves around Suzan, the young girl who is spending her summer holiday with her grandmother, while her mother has gone to Syria, as a war reporter.

- Ans
- 1. ADBC
  - 2. CADB
  - 3. BDAC
  - 4. CDBA

Question ID : 4244291528  
Status : Answered  
Chosen Option : 4



Q.23 Select the most appropriate synonym of the given word:

HAUGHTY

- Ans
- 1. Humble
  - 2. Talkative
  - 3. Arrogant
  - 4. Quiet

Question ID : 4244291539  
Status : Answered  
Chosen Option : 3

Q.24 Select the wrongly spelt word.

- Ans
- 1. Diferently
  - 2. Accidentally
  - 3. Evidently
  - 4. Prudently

Question ID : 4244291535  
Status : Answered  
Chosen Option : 1

Q.25 Select the most appropriate option to substitute the underlined segment in the given sentence. If there is no need to substitute it, select No improvement .

It is evident from current research that young adults is more like to develop an interest in spoken English if there is a change in methodology.

- Ans
- 1. are more likely
  - 2. No Improvement
  - 3. are more like
  - 4. is more likely

Question ID : 4244291530  
Status : Answered  
Chosen Option : 1

Section : General Intelligence

Q.1 If the word SMART is coded as 191311820, then how will word FUNNY be coded?

- Ans
- 1. 622131325
  - 2. 620131325
  - 3. 621141425
  - 4. 621131325

Question ID : 4244291550  
Status : Answered  
Chosen Option : 3

**Q.2** If '+' means '×', '-' means '+', '×' means '+' and '+' means '-', then what is the value of the following equation?

$$24 \times 4 + 12 - 14 + 10$$

- Ans**
- 1. 90
  - 2. 82
  - 3. 76
  - 4. 84

Question ID : 4244291549

Status : Answered

Chosen Option : 3

**Q.3** A cube of 4 cm size is painted green on all six faces. It is cut into smaller cubes of 1 cm size. How many cubes are there with 3 green faces?

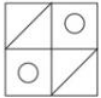
- Ans**
- 1. 12
  - 2. 16
  - 3. 8
  - 4. 4

Question ID : 4244291561

Status : Not Attempted and Marked For Review

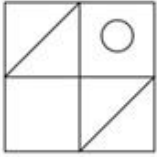
Chosen Option : --

**Q.4** Select the correct mirror image of the given figure when the mirror is placed to the right side of the figure.

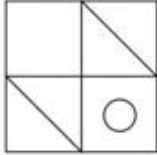


**Ans**

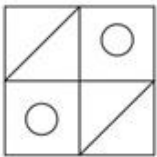
1.



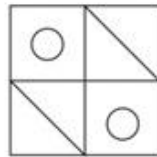
2.



3.



4.



Question ID : 4244291566

Status : Answered

Chosen Option : 4

**Q.5** The sum of the two digits of a number is 5. If we add 9 to the number we get 50. What is that number?

1. 32

2. 41

3. 14

4. 23

Question ID : 4244291545

Status : Answered

Chosen Option : 2

Q.6 Identify the number that does NOT belong to the following series.

17, 19, 23, 30, 47, 79

Ans  1. 79

2. 23

3. 30

4. 47

Question ID : 4244291548

Status : Answered

Chosen Option : 3

Q.7 Select the option in which the numbers are related in the same way as are the numbers in the following set.

(12, 27, 9)

Ans  1. (14, 21, 6)

2. (15, 52, 13)

3. (11, 21, 7)

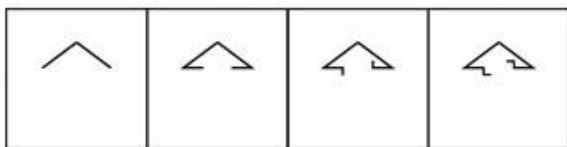
4. (5, 18, 8)

Question ID : 4244291547

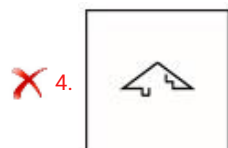
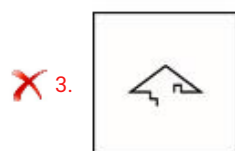
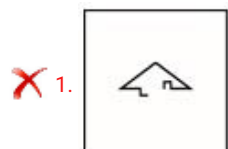
Status : Answered

Chosen Option : 1

Q.8 Select the figure that will come next in the following figure series.

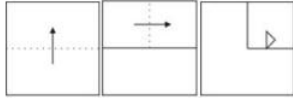


Ans



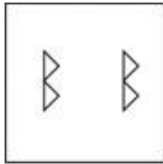
Question ID : 4244291562  
Status : Answered  
Chosen Option : 2

**Q.9** The sequence of folding a piece of paper and the manner in which the folded paper has been cut is shown in the following figures. How would this paper look when unfolded?

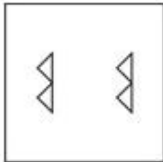


**Ans**

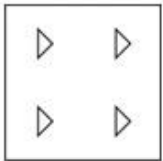
1.



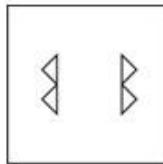
2.



3.



4.



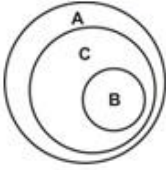
Question ID : 4244291565  
Status : Answered  
Chosen Option : 4

**Q.10** Select the Venn diagram that best illustrates the relationship between the following classes.

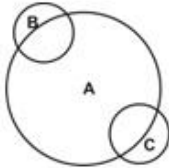
(A) Quadrilateral, (B) Rectangle, (C) Square

**Ans**

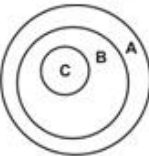
1.



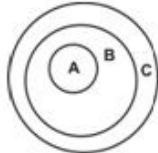
2.



3.



4.



Question ID : 4244291567

Status : Answered

Chosen Option : 3

**Q.11** Select the option that is related to the third word in the same way as the second word is related to the first word.

Angioplasty : Heart : : Dialysis : ?

**Ans**

1. Kidney

2. Lungs

3. Brain

4. Rib-cage

Question ID : 4244291554

Status : Answered

Chosen Option : 1

**Q.12** Select the option that is related to the third letter-cluster in the same way as the second letter-cluster is related to the first letter-cluster.

HEAVY : ICBTZ :: LIGHT : ?

- Ans**
- 1. MGHFU
  - 2. GMFHU
  - 3. HGMUFH
  - 4. FUGHM

Question ID : 4244291553  
Status : Answered  
Chosen Option : 1

**Q.13** In a certain code, if BRDKE is written as AQCJD, then SLEEP will be written in that code as:

- Ans**
- 1. PJDDQ
  - 2. RKDDO
  - 3. PNDDO
  - 4. RJDDN

Question ID : 4244291552  
Status : Answered  
Chosen Option : 2

**Q.14** Four words have been given, out of which three are alike in some manner and one is different. Select the odd one.

- Ans**
- 1. Sincere
  - 2. Naughty
  - 3. Creative
  - 4. Kids

Question ID : 4244291559  
Status : Answered  
Chosen Option : 4

**Q.15** In a certain code language, 'TIGER' is written as 'YMJGS'. How will 'PANDA' be written as in that language?

- Ans**
- 1. UEQFB
  - 2. UFSIF
  - 3. EQUFB
  - 4. USIFC

Question ID : 4244291551  
Status : Answered  
Chosen Option : 1



**Q.16** Read the given statements and conclusions carefully. Assuming that the information given in the statements is true, even if it appears to be at variance with commonly known facts, decide which of the given conclusions logically follow(s) from the statements.

**Statements:**

- (1) All cats are animals.
- (2) Some animals are dogs.

**Conclusions:**

- (i) All dogs are animals.
- (ii) All animals are cats.

- Ans**
- 1. Only conclusion (ii) follows.
  - 2. Neither conclusion (i) nor (ii) follows.
  - 3. Both conclusions (i) and (ii) follow.
  - 4. Only conclusion (i) follows.

Question ID : 4244291560  
Status : Answered  
Chosen Option : 2

**Q.17** Select the option that is related to the third word in the same way as the second word is related to the first word.

Sand : Desert :: Water : ?

- Ans**
- 1. Ocean
  - 2. Land
  - 3. Vapour
  - 4. Ice

Question ID : 4244291557  
Status : Answered  
Chosen Option : 1

**Q.18** Select the option in which the numbers are related in the same way as are the numbers in the following set.

(7, 46, 340)

- Ans**
- 1. (4, 28, 68)
  - 2. (8, 68, 500)
  - 3. (5, 22, 130)
  - 4. (15, 222, 3372)

Question ID : 4244291546  
Status : Answered  
Chosen Option : 3

**Q.19** Pointing to Rehan, Rukhshana said, "His paternal grandfather's daughter-in-law is my daughter's paternal grandmother".  
How is Rukhshana related to Rehan?

- Ans**
- 1. Mother
  - 2. Wife
  - 3. Sister
  - 4. Daughter

Question ID : 4244291556  
Status : Answered  
Chosen Option : 3

**Q.20** Mahira bought some erasers and some pens for ₹42. Each eraser costs ₹5 and each pen costs ₹9. How many erasers did she buy?

- Ans**
- 1. 6
  - 2. 3
  - 3. 8
  - 4. 7

Question ID : 4244291543  
Status : Answered  
Chosen Option : 2

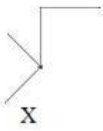
**Q.21** Which of the following options of changing the mathematical operations will make the given equation correct?

$$2 + 3 - 5 \times 3 + 3 = 16$$

- Ans**
- 1.  $\div \rightarrow \times, - \rightarrow \div, \times \rightarrow +, + \rightarrow -$
  - 2.  $\div \rightarrow \times, - \rightarrow +, \times \rightarrow \div, + \rightarrow -$
  - 3.  $\div \rightarrow -, - \rightarrow \div, \times \rightarrow +, + \rightarrow \div$
  - 4.  $\div \rightarrow +, - \rightarrow \times, \times \rightarrow -, + \rightarrow \div$

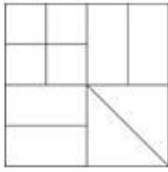
Question ID : 4244291544  
Status : Answered  
Chosen Option : 4

Q.22 Select the option in which the given figure (X) is embedded (rotation is not allowed).

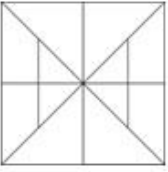


Ans

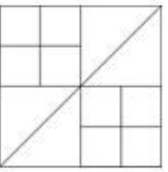
1.



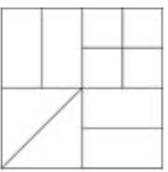
2.



3.



4.



Question ID : 4244291564  
Status : Answered  
Chosen Option : 2

Q.23 Four letter-clusters have been given, out of which three are alike in some manner and one is different. Select the odd letter-cluster.

Ans

1. CXGTIR

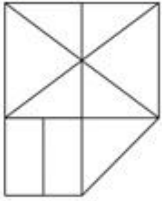
2. BYIRJQ

3. JPLNDW

4. FUEVHS

Question ID : 4244291558  
Status : Answered  
Chosen Option : 3

Q.24 How many triangles are there in the given figure?



- Ans
- 1. 14
  - 2. 13
  - 3. 12
  - 4. 7

Question ID : 4244291563  
Status : Answered  
Chosen Option : 1

Q.25 Select the combination of letters that when sequentially placed in the blanks of the given series will complete the series.

PA \_ A \_ AP \_ P \_ Y \_ PA \_ AY \_

- Ans
- 1. AYPPAAA
  - 2. AYAPAPP
  - 3. YAPPAPA
  - 4. PYAAAPA

Question ID : 4244291555  
Status : Answered  
Chosen Option : 4

Section : Quantitative Aptitude(Basic Arithmetic Skill)

Q.1 If a dining table with marked price ₹6,000 was sold to a customer for ₹5,520, then the rate of discount allowed on the marked price of the table is:

- Ans
- 1. 7%
  - 2. 5%
  - 3. 8%
  - 4. 6%

Question ID : 4244291572  
Status : Answered  
Chosen Option : 3

Q.2 If  $a + \frac{1}{a} + 2 = 0$ , then the value of  $a^{15} - \frac{1}{a^{100}}$  is:

- Ans
- 1. 0
  - 2. 2
  - 3. -2
  - 4. 1

Question ID : 4244291581  
Status : Answered  
Chosen Option : 1

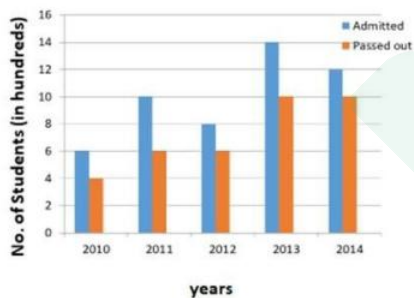
Q.3 A shopkeeper has certain number of apples of which 10% are found to be rotten. He sells 85% of the remaining good apples and still has 405 good apples. How many apples did he originally have?

- Ans
- 1. 3500
  - 2. 3000
  - 3. 2500
  - 4. 2000

Question ID : 4244291573  
Status : Answered  
Chosen Option : 2

Q.4 The bar graph shows the number of students (in hundreds) admitted and passed out per year in a college during the years 2010 to 2014.

Study the bar-graph and answer the question.



The ratio of the number of students admitted in the year 2012 to the average number of students passed out in the years 2013 and 2014 is:

- Ans
- 1. 4 : 5
  - 2. 4 : 7
  - 3. 2 : 5
  - 4. 3 : 5

Question ID : 4244291591  
Status : Answered  
Chosen Option : 1

Q.5

In a  $\Delta ABC$ ,  $\angle A = 90^\circ$ , if BM and CN are two medians,  $\frac{BM^2 + CN^2}{BC^2}$  is equal to:

Ans

1.  $\frac{3}{5}$

2.  $\frac{4}{5}$

3.  $\frac{5}{4}$

4.  $\frac{3}{4}$

Question ID : 4244291580

Status : Answered

Chosen Option : 3

Q.6

A chord 10 cm long is drawn in a circle of diameter 26 cm. The perpendicular distance of the chord from the centre is:

Ans

1. 12 cm

2. 7 cm

3. 5 cm

4. 8 cm

Question ID : 4244291577

Status : Answered

Chosen Option : 1

Q.7

If  $4a + \frac{1}{5a} = 4$ , then the value of  $25a^2 + \frac{1}{16a^2}$  is:

Ans

1.  $\frac{45}{2}$

2.  $\frac{55}{2}$

3.  $\frac{43}{2}$

4.  $\frac{45}{4}$

Question ID : 4244291582

Status : Answered

Chosen Option : 1

Q.8 The value of  $75\frac{3}{5} \div \left[ 15 \div 3 \text{ of } 5 + 7 \div \frac{1}{14} - \left( 78 \div 3\frac{1}{3} \right) \right]$  is:

- Ans
- 1. 1
  - 2. 2
  - 3. 5
  - 4. 0

Question ID : 4244291585  
Status : Answered  
Chosen Option : 1

Q.9 The profit made by selling an article for ₹8,800 is equal to the amount of loss incurred on selling the same article for ₹7,200. What will be the profit per cent, if it was sold for ₹9,600?

- Ans
- 1. 20%
  - 2. 25%
  - 3. 18%
  - 4. 15%

Question ID : 4244291574  
Status : Answered  
Chosen Option : 1

Q.10  $2^{18} - 1$  is divisible by:

- Ans
- 1. 11
  - 2. 17
  - 3. 13
  - 4. 7

Question ID : 4244291584  
Status : Answered  
Chosen Option : 2

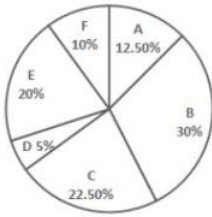
Q.11 8 pens and 3 pencils cost as much as 3 pens and 9 pencils. What is the ratio of the cost of one pen to the cost of one pencil?

- Ans
- 1. 3 : 2
  - 2. 6 : 5
  - 3. 6 : 7
  - 4. 5 : 4

Question ID : 4244291575  
Status : Answered  
Chosen Option : 2

**Q.12** The pie-chart shows the annual car production (percentage wise) of six countries A, B, C, D, E and F.

Study the pie chart and answer the question.



Total number of cars produced = 40,00,000

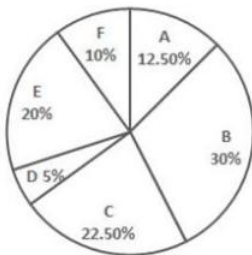
If 45% of the cars number of produced by these six countries are diesel cars and the rest are petrol cars, then how many petrol cars were produced?

- Ans**
- 1. 25 lakh
  - 2. 24 lakh
  - 3. 22 lakh
  - 4. 20 lakh

Question ID : 4244291590  
Status : Answered  
Chosen Option : 3

**Q.13** The pie-chart shows the annual car production (percentage wise) of six countries A, B, C, D, E and F.

Study the pie chart and answer the question.



Total number of cars produced = 40,00,000

The number of cars produced by country B is what percent more than that produced by country E?

- Ans**
- 1. 60%
  - 2. 25%
  - 3. 40%
  - 4. 50%

Question ID : 4244291589  
Status : Answered  
Chosen Option : 4



Q.14 If  $\alpha + \beta = 90^\circ$  and  $\alpha = 2\beta$ , then the value of  $\cos^2\alpha + \sin^2\beta$  is:

- Ans
- 1.  $\frac{1}{3}$
  - 2.  $\frac{1}{5}$
  - 3. 1
  - 4.  $\frac{1}{2}$

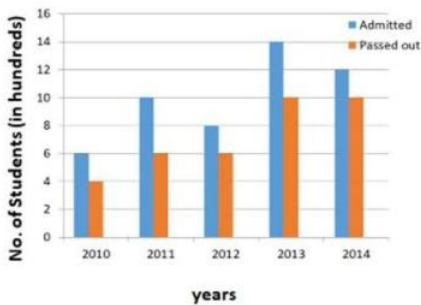
Question ID : 4244291586

Status : Answered

Chosen Option : 4

Q.15 The bar-graph shows the number of students (in hundreds) admitted and passed out per year in a college during the years 2010 to 2014.

Study the bar-graph and answer the question.



In which of the following years, was the pass percentage between 80 and 85?

- Ans
- 1. 2014
  - 2. 2011
  - 3. 2013
  - 4. 2012

Question ID : 4244291592

Status : Answered

Chosen Option : 1

Q.16 If  $\sec \theta + \tan \theta = 2 + \sqrt{5}$  and  $\theta$  is an acute angle, then the value of  $\sin \theta$  is:

Ans

✓ 1.  $\frac{2\sqrt{5}}{5}$

✗ 2.  $\frac{3}{5}$

✗ 3.  $\frac{\sqrt{5}}{5}$

✗ 4.  $\frac{1}{5}$

Question ID : 4244291587

Status : Answered

Chosen Option : 1

Q.17 In  $\triangle ABC$ ,  $AB = AC$ . If  $\angle A$  is twice the sum of other two angles of the triangle, then the measure of  $\frac{1}{2} \angle A$  is:

Ans

✗ 1.  $70^\circ$

✓ 2.  $60^\circ$

✗ 3.  $30^\circ$

✗ 4.  $80^\circ$

Question ID : 4244291579

Status : Answered

Chosen Option : 2

Q.18 The ratio of the length and the perimeter of a rectangle is 2 : 7. What is the ratio of the length and breadth of the rectangle?

Ans

✓ 1. 4 : 3

✗ 2. 4 : 5

✗ 3. 5 : 4

✗ 4. 5 : 3

Question ID : 4244291570

Status : Answered

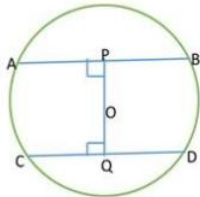
Chosen Option : 1

**Q.19** A and B can do a work in 12 days, B and C can do it in 15 days and C and A can do it in 20 days. If A, B and C work together, then they will complete the same work in:

- Ans
- 1. 12 days
  - 2. 5 days
  - 3. 10 days
  - 4. 14 days

Question ID : 4244291568  
Status : Answered  
Chosen Option : 3

**Q.20** In the figure, O is the centre of a circle of radius 29 cm,  $OT \perp AB$ ,  $OQ \perp CD$  and AB is parallel CD. If  $AB = 40$  cm and  $CD = 42$  cm, then the length of PQ is:



- Ans
- 1. 32 cm
  - 2. 20 cm
  - 3. 41 cm
  - 4. 21 cm

Question ID : 4244291578  
Status : Answered  
Chosen Option : 3

**Q.21** A man is walking at a speed of 12 km/h. After every km, he takes rest for 3 minutes. How much time will he take to cover a distance of 6 km?

- Ans
- 1. 42 minutes
  - 2. 40 minutes
  - 3. 48 minutes
  - 4. 45 minutes

Question ID : 4244291569  
Status : Answered  
Chosen Option : 4

Q.22 If  $x + \frac{1}{x} = \sqrt{3}$ , then the value of  $x^{18} + x^{12} + x^6 + 1$  is:

- Ans  1. 0  
 2. 2  
 3. 3  
 4. 1

Question ID : 4244291583

Status : Not Attempted and Marked For Review

Chosen Option : --

Q.23 If the total simple interest on a sum of ₹1,400 for 4 years at rate of interest  $x\%$  p.a. and on the same sum for two years at the same rate, is ₹672, then the value of  $x$  is:

- Ans  1. 9%  
 2. 8%  
 3. 6%  
 4. 10%

Question ID : 4244291576

Status : Answered

Chosen Option : 3

Q.24 The average weight of A, B and C is 55 kg. The weight of C is 10 kg more than A and 5 kg more than B. The average weight of A, B, C and D, if D's weight is 19 kg more than C, is:

- Ans  1. 61 kg  
 2. 60 kg  
 3. 58 kg  
 4. 62 kg

Question ID : 4244291571

Status : Answered

Chosen Option : 1

Q.25 The elimination of  $\theta$  from  $x \cos \theta - y \sin \theta = 2$  and  $x \sin \theta + y \cos \theta = 4$  will give:

- Ans  1.  $3x^2 - y^2 = 20$   
 2.  $x^2 + y^2 = 20$   
 3.  $3x^2 + y^2 = 20$   
 4.  $x^2 - y^2 = 20$

Question ID : 4244291588

Status : Answered

Chosen Option : 2

Q.1 Which of the following cell organelles is responsible for the storage, modification and packaging of products in vesicles?

- Ans
- 1. Mitochondria
  - 2. Plastids
  - 3. Golgi apparatus
  - 4. Endoplasmic reticulum

Question ID : 4244291604  
Status : Answered  
Chosen Option : 1

Q.2 In which state is the 'Chapchar Kut' festival celebrated in the month of March every year?

- Ans
- 1. Mizoram
  - 2. Odisha
  - 3. Nagaland
  - 4. Uttarakhand

Question ID : 4244291596  
Status : Answered  
Chosen Option : 3

Q.3 In Microsoft Office 2016, which shortcut key is used to open the Design tab?

- Ans
- 1. Ctrl + A
  - 2. Shift + F3
  - 3. Alt + G
  - 4. Ctrl + K

Question ID : 4244291593  
Status : Not Answered  
Chosen Option : --

Q.4 The Union Minister for Health and Family Welfare launched a campaign to reduce child mortality due to pneumonia in November 2019. What is the name of that campaign?

- Ans
- 1. BACHPAN
  - 2. MUSKAN
  - 3. SAANS
  - 4. JEEVAN

Question ID : 4244291598  
Status : Not Attempted and Marked For Review  
Chosen Option : --

Q.5 Which article of the Constitution of India states that no citizen can be discriminated against on the basis of his/her religion, race, caste, sex or place of birth?

- Ans  1. Article 15  
 2. Article 45  
 3. Article 23  
 4. Article 39

Question ID : 4244291614  
Status : Answered  
Chosen Option : 1

Q.6 On whose birth anniversary did Kanshi Ram found the Bahujan Samaj Party?

- Ans  1. BR Ambedkar  
 2. Waman Chindhuji Meshram  
 3. Jyotirao Phule  
 4. Periyar Ramasamy

Question ID : 4244291613  
Status : Not Answered  
Chosen Option : --

Q.7 Which type of computers is used to control air traffic and radar of national defence?

- Ans  1. Personal computers  
 2. Analogue computers  
 3. Hybrid computers  
 4. Digital computers

Question ID : 4244291594  
Status : Answered  
Chosen Option : 4

Q.8 In which year was the 'Ramnath Goenka Excellence in Journalism' award instituted in India?

- Ans  1. 2010  
 2. 2006  
 3. 2008  
 4. 2007

Question ID : 4244291611  
Status : Not Answered  
Chosen Option : --

Q.9 Aqua regia is a freshly prepared mixture of concentrated hydrochloric acid and concentrated nitric acid. What is the ratio of this mixture?

- Ans
- 1. 2 : 3
  - 2. 2 : 1
  - 3. 2 : 2
  - 4. 3 : 1

Question ID : 4244291603  
Status : Answered  
Chosen Option : 4

Q.10 Who won India's first gold medal at the Asian Wrestling Championship 2019?

- Ans
- 1. Bajrang Punia
  - 2. Gurpreet Singh
  - 3. Sunil Kumar
  - 4. Gyanender

Question ID : 4244291616  
Status : Answered  
Chosen Option : 1

Q.11 In which year did Babur defeat the Sultan of Delhi, Ibrahim Lodi, at Panipat and capture Delhi and Agra?

- Ans
- 1. 1526
  - 2. 1543
  - 3. 1530
  - 4. 1494

Question ID : 4244291610  
Status : Answered  
Chosen Option : 1

Q.12 At which position was India ranked at the 14th Asian Shooting Championship?

- Ans
- 1. Fifth
  - 2. Fourth
  - 3. Second
  - 4. Seventh

Question ID : 4244291615  
Status : Not Answered  
Chosen Option : --

Q.13 Which of the following is the most dominant species of trees found in the Tropical Deciduous Forests of India?

- Ans  1. Teak tree  
 2. Coconut tree  
 3. Deodar tree  
 4. Rubber tree

Question ID : 4244291607  
Status : Answered  
Chosen Option : 3

Q.14 What is the height of Mt. Godwin Austen, also known as Mt. K2?

- Ans  1. 8611 m  
 2. 8511 m  
 3. 8481 m  
 4. 8091 m

Question ID : 4244291606  
Status : Not Attempted and Marked For Review  
Chosen Option : --

Q.15 In which year did the government of India approve the release of a commemorative stamp to mark the 50th anniversary of the Bhakra-Nangal Dam?

- Ans  1. 2016  
 2. 2013  
 3. 2015  
 4. 2010

Question ID : 4244291608  
Status : Not Answered  
Chosen Option : --

Q.16 In which year was the Kaziranga National Park declared as a Reserved Forest?

- Ans  1. 1925  
 2. 1940  
 3. 1908  
 4. 1900

Question ID : 4244291605  
Status : Not Answered  
Chosen Option : --



Q.17 In which city was the '11th Nuclear Energy Conclave (NEC)-2019' held?

- Ans
- 1. Bengaluru
  - 2. Chennai
  - 3. New Delhi
  - 4. Pune

Question ID : 4244291597  
Status : Not Answered  
Chosen Option : --

Q.18 As of January 2020, how many cultural properties from India were inscribed in the UNESCO World Heritage List?

- Ans
- 1. 35
  - 2. 30
  - 3. 25
  - 4. 31

Question ID : 4244291595  
Status : Answered  
Chosen Option : 3

Q.19 Who was appointed as the Curator of Ancient Monuments in 1880?

- Ans
- 1. HH Cole
  - 2. John Marshall
  - 3. Alexander Cunningham
  - 4. James Fergusson

Question ID : 4244291609  
Status : Answered  
Chosen Option : 3

Q.20 Which Mumbai cricketer became the youngest batsman in the world to score a double hundred in list A cricket?

- Ans
- 1. Bhupen Lalwani
  - 2. Prithvi Shaw
  - 3. Yashasvi Jaiswal
  - 4. Hardik Tamore

Question ID : 4244291617  
Status : Answered  
Chosen Option : 3

Q.21 According to a Social Mobility Index released by World Economic Forum on 20 January 2020, India was ranked at which position?

- Ans
- 1. 55th
  - 2. 40th
  - 3. 82nd
  - 4. 76th

Question ID : 4244291601  
Status : Not Answered  
Chosen Option : --

Q.22 What is the chemical formula of dichlorodifluoromethane?

- Ans
- 1.  $\text{CHClF}_2$
  - 2.  $\text{C}_2\text{HCl}_2\text{F}_3$
  - 3.  $\text{CH}_2\text{FCF}_3$
  - 4.  $\text{CCl}_2\text{F}_2$

Question ID : 4244291602  
Status : Answered  
Chosen Option : 4

Q.23 How many countries were members of International Finance Corporation (IFC) till April 2019?

- Ans
- 1. 180
  - 2. 196
  - 3. 190
  - 4. 185

Question ID : 4244291600  
Status : Not Answered  
Chosen Option : --

Q.24 On 19 January 2020, India successfully test fired a nuclear-capable K-4 ballistic missile off the coast of Andhra Pradesh. What is the strike range of this missile?

- Ans
- 1. 3,500 km
  - 2. 1,000 km
  - 3. 700 km
  - 4. 5,000 km

Question ID : 4244291599  
Status : Not Answered  
Chosen Option : --

Q.25 Who among the following writers was conferred with the '29th Saraswati Samman' for his short stories collection 'Chequebook'?

- Ans
- 1. Padma Sachdev
  - 2. Vishwanath Prasad Tiwari
  - 3. Vasdev Mohi
  - 4. Amitabha Bagchi

Question ID : 4244291612

Status : Answered

Chosen Option : 3

Prepp



# Latest Sarkari jobs, Govt Exam alerts, Results and Vacancies

- ▶ Latest News and Notification
- ▶ Exam Paper Analysis
- ▶ Topic-wise weightage
- ▶ Previous Year Papers with Answer Key
- ▶ Preparation Strategy & Subject-wise Books

To know more [Click Here](#)



[www.prepp.in](http://www.prepp.in)