

**SSC
GD**

Previous Year Paper
15 Dec 2021 Shift 2
English

Exam Date	15/12/2021
Exam Time :	12:30 PM - 2:00 PM
Subject	Constable GD 2021

Section : Part A General Intelligence and Reasoning

Q.1 Select the option that is related to the fourth number in the same way as the first number is related to the second number and the fifth number is related to the sixth number.

26 : 6 :: ? : 11 :: 37 : 7

- Ans 1. 101
 2. 122
 3. 82
 4. 145

Question ID : 65497834312
Status : Answered
Chosen Option : 1

Q.2 Eight girls, K, L, M, N, O, P, Q and R, are sitting in two lines, with four girls in each line. Both the lines are facing the same direction. One line is behind the other line. K is at a corner and to the immediate left of P. O is to the immediate left of M. Two persons are sitting between K and R. L is just behind P. O is between L and M. N is not in the front line. Who is sitting between P and R?

- Ans 1. Q
 2. M
 3. L
 4. N

Question ID : 65497834311
Status : Answered
Chosen Option : 1

Q.3 Select the correct option that indicates the arrangement of the given words in the order in which they appear in an English dictionary.

1. Patent
2. Patient
3. Patience
4. Paternalism
5. Patella

- Ans 1. 1, 4, 2, 3, 5
 2. 5, 4, 1, 3, 2
 3. 5, 1, 4, 3, 2
 4. 5, 1, 2, 3, 4

Question ID : 65497834317
Status : Answered
Chosen Option : 3

Q.4 Four letter-clusters have been given, out of which three are alike in some manner and one is different. Select the letter-cluster that is different.

Ans 1. DSE

2. MMV

3. LPU

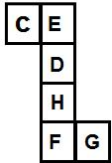
4. AMU

Question ID : 65497834329

Status : Answered

Chosen Option : 2

Q.5 A cube is made by folding the given sheet. In the cube so formed, which pair of letters will be on the opposite faces?



Ans 1. E and D

2. E and H

3. C and F

4. C and H

Question ID : 65497834314

Status : Answered

Chosen Option : 2

Q.6 Six friends, A, B, C, D, E and F, are sitting around a circular table facing the centre. D is third to the right of B. F is to the immediate right of D. C is between D and E. Who is sitting between B and F?

Ans 1. C

2. E

3. D

4. A

Question ID : 65497834310

Status : Answered

Chosen Option : 4

Q.7 Select the combination of letters that when sequentially placed in the blanks of the given series will complete the series.

K U _ _ N K _ Q P _ _ U _ P N

Ans 1. QPUNKQ

2. QPUNQK

3. QQPUNK

4. QUPQNK

Question ID : 65497834318

Status : Answered

Chosen Option : 1

Q.8 Study the given pattern carefully and select the number that can replace the question mark (?) in it.

26 19 12
32 ? 16
23 20 17

- Ans 1. 24
 2. 15
 3. 32
 4. 28

Question ID : 65497834323
Status : Answered
Chosen Option : 1





Q.9 When twice of a number added to 3 is multiplied by 5 and added to the number itself, it gives 158. What is the square of that number?

- Ans 1. 225
 2. 289
 3. 169
 4. 121

Question ID : 65497834324
Status : Answered
Chosen Option : 3

Q.10 Select the option that is embedded in the given figure (rotation is NOT allowed).



- Ans 1. 
 2. 
 3. 
 4. 

Question ID : 65497834315
Status : Answered
Chosen Option : 4

Q.11 Select the letter-cluster from among the given options that can replace the question mark (?) in the following series.

NKY, LHU, JEQ, ?, FYI

- Ans 1. HBM
 2. HCN
 3. GAO
 4. IBN


Question ID : 65497834308
Status : Answered
Chosen Option : 1

Q.12 The sequence of folding a piece of paper and the manner in which the folded paper has been cut is shown in the following figures. How would this paper look when unfolded?




Ans


1.




2.



3.



4.



Question ID : 65497834325

Status : Answered

Chosen Option : 2

Q.13 In a certain code language, 'GLARE' is written as '201526922', 'DUST' is written as '23687'. How will 'HYPER' be written in that language?

Ans

1. 19221219

2. 19211229

3. 19121229

4. 19122129

Question ID : 65497834330

Status : Answered

Chosen Option : 2

Q.14 Select the number from among the given options that can replace the question mark (?) in the following series.

7, 16, 41, ?, 171, 292

Ans

1. 100

2. 97

3. 90

4. 81

Question ID : 65497834331





Status : Answered

Chosen Option : 3

Q.15 Select the Venn diagram that best represents the relationship between the following classes.

Mothers, Daughters, Females

Ans

1. 
2. 
3. 
4. 

Question ID : 65497834316

Status : Answered

Chosen Option : 2

Q.16 In a certain code language, LOTUS is written as NMVSU. How will TULIP be written in that language?

- Ans 1. UVMJQ
2. VSNGR
3. UTMHQ
4. VWNKR

Question ID : 65497834321

Status : Answered

Chosen Option : 2

Q.17 'Medicines' is related to 'Pharmacy' in the same way as 'Historical objects' is related to _____.

- Ans 1. Culture
2. Industry
3. Museum
4. Architecture

Question ID : 65497834309

Status : Answered

Chosen Option : 3

Q.18 Read the given statements and conclusions carefully. Assuming that the information given in the statements is true, even if it appears to be at variance with commonly known facts, decide which of the given conclusions logically follow(s) from the statements.

Statements:

Some roses are pansies.
Some lilies are pansies.
All roses are daisies.

Conclusions:

I. Some roses are lilies.
II. All pansies are daisies.

- Ans** 1. Both conclusions I and II follow
 2. Only conclusion I follows
 3. Only conclusion II follows
 4. Neither conclusion I nor II follows

Question ID : 65497834322

Status : Answered

Chosen Option : 4

Q.19 In a certain code language, 'TONIC' is written as 'UPOJDB', and 'PRINT' is written as 'QSJOUS'. How will 'SUPER' be written in that language?

- Ans** 1. TVQFST
 2. TVFQSQ
 3. TUQSQF
 4. TVQFSQ

Question ID : 65497834327

Status : Answered

Chosen Option : 4

Q.20 Which two numbers should be interchanged to make the given equation correct?

$$45 + 35 \times 7 - 81 \div 9 = 321$$

- Ans** 1. 45 and 35
 2. 45 and 7
 3. 7 and 9
 4. 45 and 81

Question ID : 65497834313

Status : Answered

Chosen Option : 4

Q.21 Select the figure from among the given options that can replace the question mark (?) in the following series.



Ans

✗ 1.



✗ 2.



✗ 3.



✓ 4.



Question ID : 65497834320
Status : Answered
Chosen Option : 4

Q.22 Pointing to a photograph of a boy, Aditya said, "He is the only son of my mother-in-law's only daughter." How is the boy related to Aditya?

Ans

✗ 1. Nephew

✗ 2. Brother-in-law

✓ 3. Son

✗ 4. Father-in-law

Question ID : 65497834328
Status : Answered
Chosen Option : 3

Q.23 Select the number from among the given options that can replace the question mark (?) in the following series.

11, 33, 13, 39, 17, ?

Ans

✓ 1. 51

✗ 2. 41

✗ 3. 57

✗ 4. 19

Question ID : 65497834319
Status : Answered
Chosen Option : 1

Q.24 Select the correct mirror image of the given combination when the mirror is placed at 'PQ'.

NUMERICAL
P
|
Q

- Ans
- ✓ 1. NUMERICAL
 - ✗ 2. IANIRECAL
 - ✗ 3. IANIRECAL
 - ✗ 4. IANIRECAL

Question ID : 65497834332
Status : Answered
Chosen Option : 1

Q.25 Select the option that is related to the third letter-cluster in the same way as the second letter-cluster is related to the first letter-cluster.

BGL : HNT :: EIM : ?

- Ans
- ✗ 1. ILN
 - ✗ 2. JLP
 - ✓ 3. KPU
 - ✗ 4. QTX

Question ID : 65497834326
Status : Answered
Chosen Option : 3

Section : Part B General Knowledge and General Awareness

Q.1 Aurangzeb had depleted the military and financial resources of his empire by fighting a long war in _____.

- Ans
- ✗ 1. Hyderabad
 - ✗ 2. Awadh
 - ✗ 3. Bengal
 - ✓ 4. the Deccan

Question ID : 65497834350
Status : Not Answered
Chosen Option : --

Q.2 Project Snow Leopard was launched in India in _____.

- Ans
- ✗ 1. 2014
 - ✗ 2. 2012
 - ✓ 3. 2009
 - ✗ 4. 2006

Question ID : 65497834341
Status : Not Answered
Chosen Option : --

Q.3 Which among the following states does NOT come under the catchment area of River Yamuna?

- Ans 1. Punjab
 2. Uttarakhand
 3. Himachal Pradesh
 4. Rajasthan

Question ID : 65497834344
Status : Not Answered
Chosen Option : --

Q.4 Heptathlete Swapna Barman hails from the state of _____.

- Ans 1. Mizoram
 2. Odisha
 3. Nagaland
 4. West Bengal

Question ID : 65497834356
Status : Not Answered
Chosen Option : --

Q.5 How many Indian beaches were awarded the prestigious 'Blue Flag certification' by an international jury in October 2020?

- Ans 1. Six
 2. Five
 3. Eight
 4. Seven

Question ID : 65497834340
Status : Not Answered
Chosen Option : --

Q.6 On 1st December 2020, which of the following states launched the scheme 'Orunodoi'?

- Ans 1. Himachal Pradesh
 2. Sikkim
 3. Assam
 4. West Bengal

Question ID : 65497834343
Status : Answered
Chosen Option : 4

Q.7 Which of the following is a primary constituent of pearl?

- Ans 1. Calcium carbonate
 2. Calcium sulfate
 3. Sodium bicarbonate
 4. Magnesium Peroxide

Question ID : 65497834337
Status : Answered
Chosen Option : 1

Q.8 The Hazarduari Palace is located in _____.

- Ans 1. Bikaner
 2. Murshidabad
 3. Mysuru
 4. Jodhpur

Question ID : 65497834353
Status : Not Answered
Chosen Option : --

Q.9 Which of the following newspapers was started by Raja Ram Mohan Roy?

- Ans 1. Amrita Bazar Patrika
 2. Karmayogin
 3. Ananda Bazar Patr ka
 4. Sambad Kaumudi

Question ID : 65497834342
Status : Not Answered
Chosen Option : --

Q.10 Which among the following was the first state in the country to fix floor prices of vegetables, with effect from 1 November 2020?

- Ans 1. Kerala
 2. Odisha
 3. Tamil Nadu
 4. Telangana

Question ID : 65497834352
Status : Not Answered
Chosen Option : --

Q.11 _____ near Allahabad had a sophisticated water harvesting system that channelled the flood water of the river Ganga, even in ancient times.

- Ans 1. Lahuradewa
 2. Kaushambi (Kosambi)
 3. Sringaverapura
 4. Jhusi (Jhansi)

Question ID : 65497834354
Status : Not Answered
Chosen Option : --

Q.12 The play 'Abhijnana Shakuntalam' by Kalidasa is a love story between Shakuntala and King _____.

- Ans 1. Dushasana
 2. Dasharatha
 3. Dhritarashtra
 4. Dushyanta

Question ID : 65497834355
Status : Answered
Chosen Option : 4

Q.13 Sorters in the Wool industry sometimes get infected by a bacterium called _____, which causes a fatal blood disease called 'Sorter's Disease'.

- Ans 1. acetobacter pasteurianus
 2. anthrax
 3. edwardsiella
 4. melittangium boletus

Question ID : 65497834336
Status : Answered
Chosen Option : 4

Q.14 Article 368 of the Constitution of India is related to:

- Ans 1. agricultural procedures
 2. parliament
 3. centre state relations
 4. constitutional amendment

Question ID : 65497834351
Status : Answered
Chosen Option : 4

Q.15 In which year will India host the Women's Asian Cup in football?

- Ans 1. 2021
 2. 2024
 3. 2023
 4. 2022

Question ID : 65497834348
Status : Answered
Chosen Option : 3

Q.16 The centre of the white portion of the National Flag of India is adorned by a navy-blue Ashoka Chakra, a wheel with _____ spokes.

- Ans 1. 22
 2. 24
 3. 20
 4. 30

Question ID : 65497834335
Status : Answered
Chosen Option : 2

Q.17 Which of the following programmes was launched during Union Budget 2020-21 for the nutrition of children and pregnant women?

- Ans 1. Poshan Sang
 2. Poshan Gyan
 3. Poshan Abhiyaan
 4. Poshan Adhikar

Question ID : 65497834345
Status : Answered
Chosen Option : 4

Q.18 The expected returns to farmers over their cost of production are estimated to be highest in case of _____ at 85% as compared to other mandated Kharif crops for marketing season 2021-22 (as announced by the Cabinet Committee on Economic Affairs in June 2021).

- Ans 1. Bajra
 2. Tur (Arhar)
 3. Moong
 4. Urad

Question ID : 65497834357
Status : Not Answered
Chosen Option : --

Q.19 Who among the following is the author of the book 'The Third Pillar: How Markets and The State Leave the Community Behind'?

- Ans 1. Raghuram Rajan
 2. Ruchir Sharma
 3. Jairam Ramesh
 4. P Chidambaram

Question ID : 65497834338
Status : Not Answered
Chosen Option : --

Q.20 The Khalji and Tughluq rulers had appointed military commanders as governors of territories. These lands were called:

- Ans 1. samanta
 2. muqti
 3. iqtadar
 4. iqta

Question ID : 65497834349
Status : Answered
Chosen Option : 4

Q.21 Who among the following was elected as the first President of Hockey India from north-east India in November 2020?

- Ans 1. Gyanendro Ningombam
 2. Chinglensana Singh
 3. Kothajit Singh
 4. Mohd Mushtaque Ahmad

Question ID : 65497834334
Status : Answered
Chosen Option : 1

Q.22 Tea and Coffee are grown in _____ soil.

- Ans 1. laterite
 2. alluvial
 3. black
 4. arid

Question ID : 65497834347
Status : Answered
Chosen Option : 1

Q.23 As per the Economic Survey of India 2020-2021, which state is NOT showing gain in its forest cover?

- Ans
- 1. Karnataka
 - 2. Andhra Pradesh
 - 3. Arunachal Pradesh
 - 4. Kerala

Question ID : 65497834333
Status : Answered
Chosen Option : 2

Q.24 Krishnadevaraya, who reigned over Vijayanagar from 1509 to 1529, belonged to the:

- Ans
- 1. Saluva dynasty
 - 2. Tuluva dynasty
 - 3. Sangama dynasty
 - 4. Aravidu dynasty

Question ID : 65497834346
Status : Answered
Chosen Option : 3

Q.25 Which Article of the Constitution of India provides Fundamental Duties?

- Ans
- 1. Article 18
 - 2. Article 81
 - 3. Article 51A
 - 4. Article 21A

Question ID : 65497834339
Status : Answered
Chosen Option : 3

Section : Part C Elementary Mathematics

Q.1 The cost price of 21 articles is equal to the selling price of 15 articles. Find the gain or loss percentage.

- Ans
- 1. 23% loss
 - 2. $22\frac{1}{7}\%$ gain
 - 3. 15% loss
 - 4. 40% gain

Question ID : 65497834376
Status : Answered
Chosen Option : 4

Q.2 What is the sum of the digits of the least number which when divided by 12, 16 and 20 leaves the same remainder 6 in each case and it is divisible by 9?

- Ans
- 1. 14
 - 2. 18
 - 3. 12
 - 4. 16

Question ID : 65497834360
Status : Answered
Chosen Option : 2

Q.3 A shopkeeper bought an item for ₹4,500 and sold it at a loss of 5%. From this money, he bought another item and sold it at a profit of 10%. What is his overall profit?

- Ans**
- 1. ₹280.50
 - 2. ₹202.50
 - 3. ₹210
 - 4. ₹220

Question ID : 65497834378
Status : Answered
Chosen Option : 2

Q.4 Find the value of $5 \times [6 \times 2\{3 \times 7 \div (5 \times 3)\}]$.

- Ans**
- 1. 126
 - 2. 84
 - 3. 104
 - 4. 92

Question ID : 65497834375
Status : Answered
Chosen Option : 2

Q.5 If the simple interest charged for 9 months be 0.12 times the money borrowed, what is the rate percent per year?

- Ans**
- 1. 15%
 - 2. 18%
 - 3. 16%
 - 4. 12%

Question ID : 65497834366
Status : Answered
Chosen Option : 3

Q.6 If the ratio of three numbers A, B and C is 2 : 3 : 5, and the sum of the squares of these numbers is 3800, then the value of C is:

- Ans**
- 1. 30
 - 2. 40
 - 3. 50
 - 4. 20

Question ID : 65497834371
Status : Answered
Chosen Option : 3

Q.7 If diagonal of a cube is $\sqrt{108}$ cm, then the volume (in cm^3) of the cube is:

- Ans**
- 1. 214
 - 2. 216
 - 3. 228
 - 4. 226

Question ID : 65497834372
Status : Answered
Chosen Option : 2

Q.8 The average speed of a train is 180% of the average speed of a car. The car covers a distance of 990 km in 15 hours. The time taken (in hours) by the train to cover the distance of 891 km is:

Ans

1. $9\frac{1}{2}$

2. $7\frac{1}{2}$

3. $6\frac{1}{2}$

4. $5\frac{1}{2}$

Question ID : 65497834370

Status : Answered

Chosen Option : 2

Q.9 A dealer allows his customers a discount of 20% and still gains 20%. If the cost price of an article is ₹960, what is its marked price (in ₹)?

Ans

1. 1,280

2. 1,152

3. 1,440

4. 1,600

Question ID : 65497834363

Status : Answered

Chosen Option : 3

Q.10 When 'x' is subtracted from each of the numbers 22, 39, 56 and 107, then the resulting numbers, in this order, are in proportion. What is the mean proportional between $(x + 3)$ and $(3x - 7)$?

Ans

1. 8

2. 12

3. 14

4. 10

Question ID : 65497834380

Status : Answered

Chosen Option : 1

Q.11 In a cricket test match, Anuj completed his double century with 15 sixes and 18 fours. What percentage of runs did he make by running between the wickets to complete the double century?

Ans

1. 19%

2. 22%

3. 24.5%

4. 16.5%

Question ID : 65497834364

Status : Answered

Chosen Option : 1

Q.12 If two numbers are 12% and 48% of a third number, what percentage is the first number of the second number?

- Ans**
- 1. 30%
 - 2. 20%
 - 3. 25%
 - 4. 15%

Question ID : 65497834374

Status : Answered

Chosen Option : 3

Q.13 A machine can complete double the work that a man can complete in a given period of time. To complete a work, 10 machines and 5 men take 60 days. If there were 10 men and 5 machines, then the time it would have taken to complete the work is:

- Ans**
- 1. 90 days
 - 2. 84 days
 - 3. 68 days
 - 4. 75 days

Question ID : 65497834377

Status : Answered

Chosen Option : 4

Q.14 4 men and 4 women can complete a work in 5 days, while 2 men and 5 women can finish it in 6 days. How much time (in days) will be taken by 1 woman working alone and 1 man working all by himself to complete the work, respectively?

- Ans**
- 1. 20 and 36
 - 2. 45 and 36
 - 3. 36 and 45
 - 4. 36 and 20

Question ID : 65497834367

Status : Answered

Chosen Option : 2

Q.15 ₹9,500 is divided among three friends A, B and C such that B gets 75% of the amount that A gets and the ratio between A and C's shares is 8 : 5. The amount (in ₹) that B gets is:

- Ans**
- 1. 4,000
 - 2. 3,000
 - 3. 6,000
 - 4. 2,500

Question ID : 65497834365

Status : Answered

Chosen Option : 2

Q.16 The radius of the base of a solid right circular cylinder is 10.5 cm and its volume is 5197.5 cm^3 . What is the total surface area (in cm^2) of the cylinder? (Take $\pi = \frac{22}{7}$)

- Ans**
- 1. 1584
 - 2. 1683
 - 3. 1605
 - 4. 1749

Question ID : 65497834382
Status : Answered
Chosen Option : 2

Q.17 The average weight of the students in a class is 56 kg. If five more students whose average weight is 58 kg, join the class, the average weight of the students increases by 0.5 kg. What was the original number of students in the class?

- Ans**
- 1. 18
 - 2. 20
 - 3. 25
 - 4. 15

Question ID : 65497834361
Status : Answered
Chosen Option : 4

Q.18 The LCM and HCF of two numbers are 1920 and 4, respectively. One of the numbers is 60. Find the other number.

- Ans**
- 1. 128
 - 2. 124
 - 3. 88
 - 4. 120

Question ID : 65497834373
Status : Answered
Chosen Option : 1

Q.19 The average age of 10 members of a family is 29 years. If the youngest members are twins and each is 5 years old, what was the average age (in years) of the family members at the time of birth of the twins?

- Ans**
- 1. 28
 - 2. 30
 - 3. 31
 - 4. 32

Question ID : 65497834362
Status : Answered
Chosen Option : 1

Q.20 A train, 250 m long, passes a railway platform 200 m long, in 45 s with a uniform speed. What is the time (in seconds) taken by the train to pass a man cycling in the direction of the train at a speed of 6 km/h?

- Ans**
- 1. 30
 - 2. 62.5
 - 3. 21
 - 4. 54

Question ID : 65497834368
Status : Answered

Q.21

The expression $\frac{5\frac{5}{8}}{6\frac{7}{8}}$ of $\frac{6\frac{7}{11}}{9\frac{1}{8}} \div \frac{8}{9} \left(2\frac{3}{11} + \frac{13}{22} \right)$ of $\frac{9}{5}$ equals to:

Ans

- 1. $\frac{11}{36}$
- 2. $\frac{5}{36}$
- 3. $\frac{1}{36}$
- 4. $\frac{25}{36}$

Question ID : 65497834369

Status : Answered

Chosen Option : 2

Q.22 By selling an item for ₹3,750 a shopkeeper earned 25% profit. If the item had been sold for ₹300 more, then what would have been the profit percentage of the shopkeeper?

Ans

- 1. 32
- 2. 37.5
- 3. 35
- 4. 36

Question ID : 65497834358

Status : Answered

Chosen Option : 3

Q.23 A shopkeeper marks his goods 40% above their cost price. He sells 60% of the goods at the marked price and the remaining at 65% discount on the marked price. His gain/loss in the whole transaction is:

Ans

- 1. gain, 3.6%
- 2. gain, 9.6%
- 3. loss, 3.6%
- 4. loss, 9.6%

Question ID : 65497834379

Status : Answered

Chosen Option : 1

Q.24 A sum of ₹10,000 amounts to ₹13,225 in 2 years at a certain rate per cent per annum, when the interest is compounded annually. What will be the interest (in ₹) on the same sum for the same time at the same rate, when the interest is compounded 8-monthly?

Ans

- 1. 3,350
- 2. 3,360
- 3. 3,310
- 4. 3,290

Question ID : 65497834381

Status : Answered

Chosen Option : 3

Q.25 A sum of money lent at simple interest amounts to ₹7,920 in 2 years and to ₹11,220 after 5 more years. What is the rate of interest per annum?

- Ans** 1. 10%
 2. 9.85%
 3. 12%
 4. 17.5%

Question ID : 65497834359
Status : Answered
Chosen Option : 1

Section : Part D English

Q.1 Select the most appropriate synonym of the given word.

SUSTAIN (V)

- Ans** 1. Believe
 2. Weaken
 3. Suspect
 4. Support

Question ID : 65497834401
Status : Answered
Chosen Option : 4

Q.2 Select the most appropriate option to fill in the blank.

Disasters expose the most _____ section of society to grave danger.

- Ans** 1. equitable
 2. sustainable
 3. vulnerable
 4. potable

Question ID : 65497834387
Status : Answered
Chosen Option : 3

Q.3 Select the most appropriate ANTONYM of the given word.

Just

- Ans** 1. Blur
 2. Fail
 3. Conclude
 4. Corrupt

Question ID : 65497834385
Status : Answered
Chosen Option : 4

Q.4 Select the option that can be used as a one-word substitute for the given group of words.

Sound made by a horse

- Ans 1. Bray
 2. Bark
 3. Growl
 4. Neigh

Question ID : 65497834384
Status : Answered
Chosen Option : 4

Q.5 The following sentence has been split into four segments. Identify the segment that contains a grammatical error.

Its matter of great concern / for the authorities that / despite all the efforts, / the number of patients is increasing.

- Ans 1. the number of patients is increasing
 2. despite all the efforts
 3. for the authorities that
 4. Its matter of great concern

Question ID : 65497834388
Status : Answered
Chosen Option : 4

Q.6 Select the correctly spelt word.

- Ans 1. Mathematiks
 2. Mathematics
 3. Mathemetics
 4. Maethematics

Question ID : 65497834386
Status : Answered
Chosen Option : 2

Q.7 Select the most appropriate ANTONYM of the given word.

Delicious

- Ans 1. Satisfactory
 2. Sweet
 3. Distasteful
 4. Tasteful

Question ID : 65497834389
Status : Answered
Chosen Option : 3

Q.8 Select the most appropriate option that can substitute the underlined word in the given sentence. If there is no need to substitute it, select 'No substitution required'.

Despite play very well, we lost the match.

- Ans
- 1. No substitution required
 - 2. Despite of our playing
 - 3. Despite playing
 - 4. Despite of us playing

Question ID : 65497834397
Status : Answered
Chosen Option : 3

Q.9 Select the option that can be used as a one-word substitute for the given group of words.

Person who is the natural successor to ancestral property

- Ans
- 1. Extrovert
 - 2. Heretic
 - 3. Interlocutor
 - 4. Heir

Question ID : 65497834390
Status : Answered
Chosen Option : 4

Q.10 Select the most appropriate option to fill in the blank.

The ticket gives _____ travel on city buses for as little as ₹100.

- Ans
- 1. never-ending
 - 2. uncontrolled
 - 3. infinite
 - 4. unlimited

Question ID : 65497834398
Status : Answered
Chosen Option : 1

Q.11 The following sentence has been divided into parts. One of them may contain an error. Select the part that contains the error from the given options. If you don't find any error, mark 'No error' as your answer.

Did you knew / that there will be / a pay hike soon?

- Ans
- 1. a pay hike soon
 - 2. No error
 - 3. that there will be
 - 4. Did you knew

Question ID : 65497834400
Status : Answered
Chosen Option : 4

Q.12 Select the **INCORRECTLY** spelt word.

- Ans 1. Gullible
 2. Dissimulation
 3. Magnanemous
 4. Indecisiveness

Question ID : 65497834391
Status : Answered
Chosen Option : 3

Q.13 Select the most appropriate meaning of the given idiom.

To spill the beans

- Ans 1. To work very hard
 2. To give away a secret
 3. To throw away something important
 4. To do something very difficult

Question ID : 65497834399
Status : Answered
Chosen Option : 2

Q.14 Select the most appropriate synonym of the given word.

Sullen

- Ans 1. Dazzling
 2. Smart
 3. Bright
 4. Grim

Question ID : 65497834393
Status : Answered
Chosen Option : 4

Q.15 The following sentence has been split into four segments. Identify the segment that contains a grammatical error.

The examinations / will be pushed back / so that candidates get additional time / for prepare.

- Ans 1. so that candidates get additional time
 2. will be pushed back
 3. The examinations
 4. for prepare

Question ID : 65497834392
Status : Answered
Chosen Option : 4

Q.16 Select the most appropriate meaning of the given idiom.

To take up the gauntlet

- Ans
- 1. To face failure
 - 2. To deny the challenge
 - 3. To accept a challenge
 - 4. To suffer humiliation

Question ID : 65497834395
Status : Answered
Chosen Option : 3

Q.17 Select the most appropriate option that can substitute the underlined segment in the given sentence. If there is no need to substitute it, select 'No substitution required'.

This is the garage when I get my car repaired.

- Ans
- 1. wherever
 - 2. where
 - 3. No substitution required
 - 4. whenever

Question ID : 65497834383
Status : Answered
Chosen Option : 2

Q.18 Select the most appropriate option that can substitute the underlined word in the given sentence. If there is no need to substitute it, select 'No substitution required'.

Either Sumit or Amit will give their assistance in unloading the goods from the truck.

- Ans
- 1. his
 - 2. No substitution required
 - 3. your
 - 4. its

Question ID : 65497834396
Status : Answered
Chosen Option : 1

Q.19 Select the most appropriate option to fill in the blank.

She found herself in an _____ situation and left quickly.

- Ans
- 1. abstract
 - 2. awkward
 - 3. obvious
 - 4. elegant

Question ID : 65497834394
Status : Answered
Chosen Option : 2

Q.20 Select the option that can be used as a one-word substitute for the given group of words.

A solemn promise

- Ans 1. Salute
 2. Contract
 3. Pledge
 4. Tribute

Question ID : 65497834402

Status : Answered

Chosen Option : 3

Comprehension:

In the following passage, some words have been deleted. Read the passage carefully and select the most appropriate option to fill in each blank.

Modern scientific and technological developments in the practice of medicine and public health (1)_____ nursing into new and wider fields of activity, and its functions have been expanded (2)_____. Therefore, nursing is no longer limited mainly to activities within the hospital. It has also become (3)_____ in which prevention and rehabilitation are a vital part of its program. The modern concept of nursing considers the hospital, (4)_____ central, as only one of (5)_____ in the community.

SubQuestion No : 21

Q.21 Select the most appropriate option to fill in blank no. 1.

- Ans 1. had drawn
 2. are drawn
 3. drew
 4. are drawing

Question ID : 65497834404

Status : Answered

Chosen Option : 4

Comprehension:

In the following passage, some words have been deleted. Read the passage carefully and select the most appropriate option to fill in each blank.

Modern scientific and technological developments in the practice of medicine and public health (1)_____ nursing into new and wider fields of activity, and its functions have been expanded (2)_____. Therefore, nursing is no longer limited mainly to activities within the hospital. It has also become (3)_____ in which prevention and rehabilitation are a vital part of its program. The modern concept of nursing considers the hospital, (4)_____ central, as only one of (5)_____ in the community.

SubQuestion No : 22

Q.22 Select the most appropriate option to fill in blank no. 2.

- Ans 1. respectively
 2. accordingly
 3. naturally
 4. consistently

Question ID : 65497834405

Status : Answered

Chosen Option : 4

Comprehension:

In the following passage, some words have been deleted. Read the passage carefully and select the most appropriate option to fill in each blank.

Modern scientific and technological developments in the practice of medicine and public health (1)_____ nursing into new and wider fields of activity, and its functions have been expanded (2)_____. Therefore, nursing is no longer limited mainly to activities within the hospital. It has also become (3)_____ in which prevention and rehabilitation are a vital part of its program. The modern concept of nursing considers the hospital, (4)_____ central, as only one of (5)_____ in the community.

SubQuestion No : 23

Q.23 Select the most appropriate option to fill in blank no. 3.

- Ans 1. community services
 2. the community service
 3. a community service
 4. community service

Question ID : 65497834406
Status : Answered
Chosen Option : 3

Comprehension:

In the following passage, some words have been deleted. Read the passage carefully and select the most appropriate option to fill in each blank.

Modern scientific and technological developments in the practice of medicine and public health (1)_____ nursing into new and wider fields of activity, and its functions have been expanded (2)_____. Therefore, nursing is no longer limited mainly to activities within the hospital. It has also become (3)_____ in which prevention and rehabilitation are a vital part of its program. The modern concept of nursing considers the hospital, (4)_____ central, as only one of (5)_____ in the community.

SubQuestion No : 24

Q.24 Select the most appropriate option to fill in blank no. 4.

- Ans 1. whenever
 2. however
 3. wherever
 4. whatever

Question ID : 65497834407
Status : Answered
Chosen Option : 2

Comprehension:

In the following passage, some words have been deleted. Read the passage carefully and select the most appropriate option to fill in each blank.

Modern scientific and technological developments in the practice of medicine and public health (1)_____ nursing into new and wider fields of activity, and its functions have been expanded (2)_____. Therefore, nursing is no longer limited mainly to activities within the hospital. It has also become (3)_____ in which prevention and rehabilitation are a vital part of its program. The modern concept of nursing considers the hospital, (4)_____ central, as only one of (5)_____ in the community.

SubQuestion No : 25

Q.25 Select the most appropriate option to fill in blank no. 5.

- Ans 1. the many agency
 2. the many agencies
 3. many agency
 4. many agencies

Question ID : 65497834408
Status : Answered
Chosen Option : 2

Q.1 दिए गए वाक्यांश के लिए एक शब्द का चयन करें:

असाधारण मेधा बुद्धि वाला

- Ans 1. महाज्ञानी
 2. मेधावी
 3. बुद्धिशाली
 4. बुद्धिमान

Question ID : 65497834417
Status : Not Answered
Chosen Option : --

Q.2 'सुर' का पर्यायवाची है-

- Ans 1. देवता
 2. सूर्य
 3. राक्षस
 4. सुरग

Question ID : 65497834426
Status : Not Answered
Chosen Option : --

Q.3 रिक्त स्थान की पूर्ति करने के लिए सर्वाधिक उपयुक्त विकल्प का चयन करें।

बारात का _____ किया गया।

- Ans 1. अभिवादन
 2. समापन
 3. स्वागत
 4. आवभगत

Question ID : 65497834428
Status : Not Answered
Chosen Option : --

Q.4 अशुद्ध वर्तनी वाले शब्द का चयन करें।

- Ans 1. कनिष
 2. कौतूहल
 3. महाराजा
 4. दयालु

Question ID : 65497834414
Status : Not Answered
Chosen Option : --

Q.5 रिक्त स्थान की पूर्ति करने के लिए सर्वाधिक उपयुक्त शब्द का चयन कीजिए।

नाटक _____ पर खेला जाता है।

- Ans 1. रगमच
 2. चौराहे
 3. मच
 4. मेज

Question ID : 65497834409
Status : Not Answered
Chosen Option : --

Q.6 दिए गए वाक्य का वह भाग ज्ञात करें जिसमें कोई त्रुटि है। यदि कोई त्रुटि नहीं है, तो 'कोई त्रुटि नहीं है' चुनें।

बुरा से बुरा (1)/ आदमी यह (2)/ कहता है। (3)/ कोई त्रुटि नहीं है (4)

- Ans 1. 3
 2. 2
 3. 1
 4. 4

Question ID : 65497834410
Status : Not Answered
Chosen Option : --

Q.7 सही वर्तनी वाले शब्द का चयन करें।

- Ans 1. शुषुम्ना
 2. सुषुम्ना
 3. शसुम्ना
 4. सुशुम्ना

Question ID : 65497834413
Status : Not Answered
Chosen Option : --

Q.8 दिए गए शब्द के समानार्थी शब्द का चयन कीजिए।

अटवी

- Ans 1. जगल
 2. अडिग
 3. अचल
 4. अटल

Question ID : 65497834411
Status : Not Answered
Chosen Option : --

Q.9 दिए गए वाक्य के किस भाग में त्रुटि है?

भारत में अनेक प्रदेशिक भाषाएँ हैं।

- Ans
- 1. प्रदेशिक
 - 2. भारत में
 - 3. अनेक
 - 4. भाषाएँ हैं।

Question ID : 65497834425
Status : Not Answered
Chosen Option : --

Q.10 दिए गए वाक्यांश के लिए एक शब्द का चयन करें:

विस्थापित लोगो को पुनः बसाना

- Ans
- 1. पुनर्वा
 - 2. पुनरावृत्ति
 - 3. पुनर्वास
 - 4. पुनरुक्ति

Question ID : 65497834424
Status : Not Answered
Chosen Option : --

Q.11 दिए गए शब्द का विलोम चुने –

उर्वरा

- Ans
- 1. ऊसर
 - 2. मोक्ष
 - 3. क्षुद्र
 - 4. सपन्न

Question ID : 65497834423
Status : Not Answered
Chosen Option : --

Q.12 दिए गए वाक्य में रेखांकित खंड को प्रतिस्थापित करने के लिए सर्वाधिक उपयुक्त विकल्प का चयन करें। यदि इसे प्रतिस्थापित करने की आवश्यकता नहीं है, तो विकल्प 'किसी बदलाव की आवश्यकता नहीं है' का चयन करें।

सुधा भूख में बेचैन है।

- Ans
- 1. भूख के
 - 2. भूख में
 - 3. भूख से
 - 4. किसी बदलाव की आवश्यकता नहीं है।

Question ID : 65497834412
Status : Not Answered
Chosen Option : --

Q.13 'गले का हार होना' मुहावरे का सही अर्थ है-

- Ans
- 1. समस्या पैदा करना
 - 2. बहुत प्यारा होना
 - 3. बहुत कीमती होना
 - 4. गहरी मित्रता होना

Question ID : 65497834427

Status : Not Answered

Chosen Option : --

Q.14 निम्नलिखित प्रश्न में, दिए गए चार विकल्पों में से उस विकल्प का चयन करें, जो मुहावरे के सही अर्थ को व्यक्त करता है।

पहाड़ टूटना

- Ans
- 1. भारी विपत्ति आना
 - 2. विपत्ति के समय कोई साथ न देना
 - 3. पहाड़ टूट कर गिरना
 - 4. खूब लाभ उठाना

Question ID : 65497834416

Status : Not Answered

Chosen Option : --

Q.15 दिए गए वाक्य का वह भाग ज्ञात करें जिसमें कोई त्रुटि है। यदि कोई त्रुटि नहीं है, तो 'कोई त्रुटि नहीं है' चुनें।

आपसी मनमुटाव को सामने - आमने बैठकर बातचीत से दूर करें।

- Ans
- 1. बातचीत से दूर करें।
 - 2. कोई त्रुटि नहीं है।
 - 3. सामने - आमने बैठकर
 - 4. आपसी मनमुटाव को

Question ID : 65497834422

Status : Not Answered

Chosen Option : --

Q.16 रिक्त स्थान की पूर्ति करने के लिए सर्वाधिक उपयुक्त शब्द का चयन करें।

लड़का बीमार है _____ पढ़ने नहीं आया।

- Ans
- 1. इससे
 - 2. क्योंकि
 - 3. इसलिए
 - 4. कदाचित्

Question ID : 65497834419

Status : Not Answered

Chosen Option : --

Q.17 दिए गए वाक्य में रेखांकित खंड को प्रतिस्थापित करने के लिए सर्वाधिक उपयुक्त विकल्प का चयन करें। यदि इसे प्रतिस्थापित करने की आवश्यकता नहीं है, तो विकल्प 'किसी बदलाव की आवश्यकता नहीं है' का चयन करें।

कई रेलवे के कर्मचारियों की गिरफ्तारी हुई।

- Ans
- 1. कईों की रेलवे
 - 2. किसी बदलाव की आवश्यकता नहीं है।
 - 3. रेलवे के कई
 - 4. कई के रेलवे

Question ID : 65497834420

Status : Not Answered

Chosen Option : --

Q.18 दिए गए शब्द का विलोम चुनें।

क्रूर

- Ans
- 1. दयालु
 - 2. असुर
 - 3. विधुर
 - 4. निष्ठुर

Question ID : 65497834415

Status : Not Answered

Chosen Option : --

Q.19 निम्नलिखित प्रश्न में, दिए गए चार विकल्पों में से उस विकल्प का चयन करें, जो मुहावरे के सही अर्थ को व्यक्त करता है।

हाथ मलना-

- Ans
- 1. खो देना
 - 2. दोनों हाथों को मसलना
 - 3. हार मान लेना
 - 4. पछताना

Question ID : 65497834421

Status : Not Answered

Chosen Option : --

Q.20 दिए गए वाक्य में रेखांकित खंड को प्रतिस्थापित करने के लिए सर्वाधिक उपयुक्त विकल्प का चयन करें। यदि इसे प्रतिस्थापित करने की आवश्यकता नहीं है, तो विकल्प 'किसी बदलाव की आवश्यकता नहीं है' का चयन करें।

जगली जानवर, चिड़ियाघर में हमारे मनोरंजन ही करते हैं।

- Ans
- 1. किसी बदलाव की आवश्यकता नहीं है।
 - 2. हमारा मनोरंजन ही करते हैं।
 - 3. हमारे मनोरंजन ही करता हैं।
 - 4. हमारे मनोरंजन ही कर रहे हैं।

Question ID : 65497834418

Status : Not Answered

Chosen Option : --

Comprehension:

दिए गए गद्यांश में से कुछ शब्द हटा दिए गए हैं, दिए गए विकल्पों की सहायता से रिक्त स्थान की पूर्ति करें, प्रत्येक सख्खा के लिए सर्वाधिक उपयुक्त विकल्प का चयन करें।

सकारात्मक सोच व्यक्ति को (1) _____ की ओर ले जाती है। कहा भी जाता है कि मन के हारे हार है, मन के जीते (2) _____। जीवन एक सघर्ष है और इसका हमें (3) _____ होकर सामना करना चाहिए। सकारात्मक सोच से ऊर्जा प्राप्त होती है और हमारा (4) _____ बढ़ता है। निराशा हमें कमजोर बनाती है जबकि आशा नई (5) _____ दिखाती है।

SubQuestion No : 21

Q.21 गद्यांश के रिक्त स्थान (1) के लिए सर्वाधिक उपयुक्त शब्द होगा-

- Ans
- 1. असफलता
 - 2. पतन
 - 3. सफलता
 - 4. सघर्ष

Question ID : 65497834430

Status : Not Answered

Chosen Option : --

Comprehension:

दिए गए गद्यांश में से कुछ शब्द हटा दिए गए हैं, दिए गए विकल्पों की सहायता से रिक्त स्थान की पूर्ति करें, प्रत्येक सख्खा के लिए सर्वाधिक उपयुक्त विकल्प का चयन करें।

सकारात्मक सोच व्यक्ति को (1) _____ की ओर ले जाती है। कहा भी जाता है कि मन के हारे हार है, मन के जीते (2) _____। जीवन एक सघर्ष है और इसका हमें (3) _____ होकर सामना करना चाहिए। सकारात्मक सोच से ऊर्जा प्राप्त होती है और हमारा (4) _____ बढ़ता है। निराशा हमें कमजोर बनाती है जबकि आशा नई (5) _____ दिखाती है।

SubQuestion No : 22

Q.22 गद्यांश के रिक्त स्थान (2) के लिए सर्वाधिक उपयुक्त शब्द होगा-

- Ans
- 1. आनंद
 - 2. पीड़ा
 - 3. प्रसन्नता
 - 4. जीत

Question ID : 65497834431

Status : Not Answered

Chosen Option : --

Comprehension:

दिए गए गद्यांश में से कुछ शब्द हटा दिए गए हैं, दिए गए विकल्पों की सहायता से रिक्त स्थान की पूर्ति करें, प्रत्येक सख्खा के लिए सर्वाधिक उपयुक्त विकल्प का चयन करें।

सकारात्मक सोच व्यक्ति को (1) _____ की ओर ले जाती है। कहा भी जाता है कि मन के हारे हार है, मन के जीते (2) _____। जीवन एक सघर्ष है और इसका हमें (3) _____ होकर सामना करना चाहिए। सकारात्मक सोच से ऊर्जा प्राप्त होती है और हमारा (4) _____ बढ़ता है। निराशा हमें कमजोर बनाती है जबकि आशा नई (5) _____ दिखाती है।

SubQuestion No : 23

Q.23 गद्यांश के रिक्त स्थान (3) के लिए सर्वाधिक उपयुक्त शब्द होगा-

- Ans
- 1. लापरवाह
 - 2. बेपरवाह
 - 3. निडर
 - 4. भयभीत

Question ID : 65497834432

Status : Not Answered

Chosen Option : --

Comprehension:

दिए गए गद्यांश में से कुछ शब्द हटा दिए गए हैं, दिए गए विकल्पों की सहायता से रिक्त स्थान की पूर्ति करें, प्रत्येक सख्या के लिए सर्वाधिक उपयुक्त विकल्प का चयन करें।

सकारात्मक सोच व्यक्ति को (1) _____ की ओर ले जाती है। कहा भी जाता है कि मन के हारे हार है, मन के जीते (2) _____। जीवन एक संघर्ष है और इसका हमें (3) _____ होकर सामना करना चाहिए। सकारात्मक सोच से ऊर्जा प्राप्त होती है और हमारा (4) _____ बढ़ता है। निराशा हमें कमजोर बनाती है जबकि आशा नई (5) _____ दिखाती है।

SubQuestion No : 24

Q.24 गद्यांश के रिक्त स्थान (4) के लिए सर्वाधिक उपयुक्त शब्द होगा-

- Ans
- 1. दायरा
 - 2. साम्राज्य
 - 3. आत्मविश्वास
 - 4. कार्य

Question ID : 65497834433

Status : Not Answered

Chosen Option : --

Comprehension:

दिए गए गद्यांश में से कुछ शब्द हटा दिए गए हैं, दिए गए विकल्पों की सहायता से रिक्त स्थान की पूर्ति करें, प्रत्येक सख्या के लिए सर्वाधिक उपयुक्त विकल्प का चयन करें।

सकारात्मक सोच व्यक्ति को (1) _____ की ओर ले जाती है। कहा भी जाता है कि मन के हारे हार है, मन के जीते (2) _____। जीवन एक संघर्ष है और इसका हमें (3) _____ होकर सामना करना चाहिए। सकारात्मक सोच से ऊर्जा प्राप्त होती है और हमारा (4) _____ बढ़ता है। निराशा हमें कमजोर बनाती है जबकि आशा नई (5) _____ दिखाती है।

SubQuestion No : 25

Q.25 गद्यांश के रिक्त स्थान (5) के लिए सर्वाधिक उपयुक्त शब्द होगा-

- Ans
- 1. राह
 - 2. दुनिया
 - 3. बात
 - 4. जीवन

Question ID : 65497834434

Status : Not Answered

Chosen Option : --