

National Testing Agency

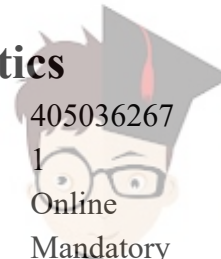
Question Paper Name :	B PLANNING 1st Sep 2020 Shift 2
Subject Name :	B PLANNING
Creation Date :	2020-09-01 22:08:49
Duration :	180
Total Marks :	400
Display Marks:	Yes
Share Answer Key With Delivery Engine :	Yes
Actual Answer Key :	Yes

B PLANNING

Group Number :	1
Group Id :	40503677
Group Maximum Duration :	0
Group Minimum Duration :	180
Show Attended Group? :	No
Edit Attended Group? :	No
Break time :	0
Group Marks :	400
Is this Group for Examiner? :	No

Section Id :	405036267
Section Number :	1
Section type :	Online
Mandatory or Optional :	Mandatory
Number of Questions :	25

Mathematics



collegedunia.com

India's largest Student Review Platform

Number of Questions to be attempted :	25
Section Marks :	100
Display Number Panel :	Yes
Group All Questions :	Yes
Mark As Answered Required? :	Yes
Sub-Section Number :	1
Sub-Section Id :	405036551
Question Shuffling Allowed :	Yes

Question Number : 1 Question Id : 4050367543 Question Type : MCQ Option Shuffling : Yes Display Question Number : Yes Is Question Mandatory : No Single Line Question Option : No Option Orientation : Vertical Correct Marks : 4 Wrong Marks : 1

Let $A = \{1, 2, 3\}$. Define a relation R on A

as :

$$aRb \Leftrightarrow |a^2 - b^2| \leq 5.$$

Then which of the following is not true ?


Options :

40503627556. $R^{-1} = R$, where R^{-1} is the inverse of R .

40503627557. Range of R is A .

40503627558. R is reflexive and symmetric.

40503627559. R is symmetric and transitive.



Question Number : 1 Question Id : 4050367543 Question Type : MCQ Option Shuffling : Yes Display Question Number : Yes Is Question Mandatory : No Single Line Question Option : No Option Orientation : Vertical Correct Marks : 4 Wrong Marks : 1

माना $A = \{1, 2, 3\}$ है। A पर एक सम्बन्ध R निम्न द्वारा परिभाषित है :

$$aRb \Leftrightarrow |a^2 - b^2| \leq 5$$

तो निम्न में से कौन सा सत्य नहीं है?

Options :

40503627556. $R^{-1} = R$, जहाँ R^{-1} , R का प्रतिलोम (inverse) है।

40503627557. R का परिसर A है।

40503627558. R स्वतुल्य तथा सममित है।

40503627559. R सममित तथा संक्रामक है।

Question Number : 1 Question Id : 4050367543 Question Type : MCQ Option Shuffling : Yes Display Question Number : Yes Is Question Mandatory : No Single Line Question Option : No Option Orientation : Vertical

Correct Marks : 4 Wrong Marks : 1

ધારોકે $A = \{1, 2, 3\}$ છે. A પર સંબંધ R એ

$$aRb \Leftrightarrow |a^2 - b^2| \leq 5.$$

મુજબ વ્યાખ્યાયિત કરો. તો નીચેના પૈકી કયું સાચું નથી?

Options :

40503627556. $R^{-1} = R$, જ્યાં R^{-1} એ R નું વ્યસ્ત છે.

40503627557. R નો વિસ્તાર A છે.



collegedunia.com

India's largest Student Review Platform

40503627558. R એ સ્વવાચક અને સંમિત છે.

40503627559. R એ સંમિત અને પરંપરિત છે.

Question Number : 2 Question Id : 4050367544 Question Type : MCQ Option Shuffling : Yes Display Question Number : Yes Is Question Mandatory : No Single Line Question Option : No Option Orientation : Vertical

Correct Marks : 4 Wrong Marks : 1

The locus of the point

$z = x + iy$ ($x, y \in \mathbb{R}, i = \sqrt{-1}$) satisfying

$$\arg\left(\frac{z-3}{z+3}\right) = \frac{\pi}{3}, \text{ is :}$$

Options :

40503627560. a circle with radius $= 2\sqrt{3}$

40503627561. a circle with centre at $(\sqrt{3}, 0)$

40503627562. a circle with centre at $(0, 2\sqrt{3})$ and
radius 3

40503627563. an ellipse with length of its minor axis
 $= 3$



collegedunia.com

Question Number : 2 Question Id : 4050367544 Question Type : MCQ Option Shuffling : Yes Display Question Number : Yes Is Question Mandatory : No Single Line Question Option : No Option Orientation : Vertical

Correct Marks : 4 Wrong Marks : 1

बिन्दु $z = x + iy$ ($x, y \in \mathbb{R}, i = \sqrt{-1}$), जो

$\arg\left(\frac{z-3}{z+3}\right) = \frac{\pi}{3}$ को संतुष्ट करता है, का बिन्दु

पथ है :

Options :

40503627560. एक वृत्त जिसकी त्रिज्या $2\sqrt{3}$ है।

40503627561. एक वृत्त जिसका केन्द्र $(\sqrt{3}, 0)$ है।

40503627562. एक वृत्त जिसका केन्द्र $(0, 2\sqrt{3})$ तथा त्रिज्या 3 है।

40503627563. एक दीर्घवृत्त जिसके लघु अक्ष की लम्बाई 3 है।

Question Number : 2 Question Id : 4050367544 Question Type : MCQ Option Shuffling : Yes Display Question Number : Yes Is Question Mandatory : No Single Line Question Option : No Option Orientation : Vertical

Correct Marks : 4 Wrong Marks : 1

$\arg\left(\frac{z-3}{z+3}\right) = \frac{\pi}{3}$ नुं समाधान करतुं होय तेवा बिंदु

$z = x + iy$ ($x, y \in \mathbb{R}, i = \sqrt{-1}$) नो बिंदुपथ अ

Options :

40503627560. $2\sqrt{3}$ त्रिज्या वाणुं अक वर्तुण छे.

40503627561. $(\sqrt{3}, 0)$ केन्द्रवाणुं अक वर्तुण छे.



collegedunia.com

India's largest Student Review Platform

40503627562. $(0, 2\sqrt{3})$ કેન્દ્રવાળું અને 3 ત્રિજ્યાવાળું એક વર્તુળ છે.

40503627563. જેના ગૌણઅક્ષની લંબાઈ = 3 હોય તેવો એક ઉપવલય છે.

Question Number : 3 Question Id : 4050367545 Question Type : MCQ Option Shuffling : Yes Display Question Number : Yes Is Question Mandatory : No Single Line Question Option : No Option Orientation : Vertical Correct Marks : 4 Wrong Marks : 1

If both the roots of the equation, $x^2 - 2ax + a^2 - 1 = 0$ ($a \in \mathbf{R}$) lie in the interval $(-2, 2)$, then the equation, $x^2 - (a^2 + 1)x - (a^2 + 2) = 0$ has

Options :

40503627564. both roots in $(-3, 0)$

40503627565. one root in $(0, 2)$ and another root in $(-2, 0)$

40503627566. one root in $[2, 3)$ and another root in $(-2, 0)$

40503627567. one root in $(-3, -2)$ and another root in $(0, 2]$



Question Number : 3 Question Id : 4050367545 Question Type : MCQ Option Shuffling : Yes Display Question Number : Yes Is Question Mandatory : No Single Line Question Option : No Option Orientation : Vertical

Correct Marks : 4 Wrong Marks : 1

यदि समीकरण, $x^2 - 2ax + a^2 - 1 = 0$ ($a \in \mathbb{R}$) के दोनों मूल, अन्तराल $(-2, 2)$ में हैं, तो समीकरण, $x^2 - (a^2 + 1)x - (a^2 + 2) = 0$:

Options :

40503627564. के दोनों मूल $(-3, 0)$ में हैं।

40503627565. का एक मूल $(0, 2)$ में तथा दूसरा मूल $(-2, 0)$ में है।

40503627566. का एक मूल $[2, 3)$ में तथा दूसरा मूल $(-2, 0)$ में है।

40503627567. का एक मूल $(-3, -2)$ में तथा दूसरा मूल $(0, 2]$ में है।

Question Number : 3 Question Id : 4050367545 Question Type : MCQ Option Shuffling : Yes Display Question Number : Yes Is Question Mandatory : No Single Line Question Option : No Option Orientation : Vertical

Correct Marks : 4 Wrong Marks : 1

જો સમીકરણ $x^2 - 2ax + a^2 - 1 = 0$, ($a \in \mathbb{R}$) નાં બંને બીજા અંતરાલ $(-2, 2)$ માં હોય, તો સમીકરણ $x^2 - (a^2 + 1)x - (a^2 + 2) = 0$:

Options :

40503627564. નાં બંને બીજા $(-3, 0)$ માં છે.



collegedunia.com

India's largest Student Review Platform

નું એક બીજ (0, 2) માં અને બીજું બીજ
40503627565. (-2, 0) માં છે.

નું એક બીજ [2, 3) માં અને બીજું બીજ
40503627566. (-2, 0) માં છે.

નું એક બીજ (-3, -2) માં અને બીજું બીજ
40503627567. (0, 2] માં છે.

Question Number : 4 Question Id : 4050367546 Question Type : MCQ Option Shuffling : Yes Display Question Number : Yes Is Question Mandatory : No Single Line Question Option : No Option Orientation : Vertical Correct Marks : 4 Wrong Marks : 1

If the system of equations

$$2x + y + pz = -1$$

$$3x - 2y + z = q$$

$$5x - 8y + 9z = 5$$

has more than one solution, then $q - p$ is equal to :

Options :

40503627568. 2

40503627569. -2

40503627570. 4

40503627571. -4



collegedunia.com

India's largest Student Review Platform

Question Number : 4 Question Id : 4050367546 Question Type : MCQ Option Shuffling : Yes Display Question Number : Yes Is Question Mandatory : No Single Line Question Option : No Option Orientation : Vertical

Correct Marks : 4 Wrong Marks : 1

यदि समीकरण निकाय

$$2x + y + pz = -1$$

$$3x - 2y + z = q$$

$$5x - 8y + 9z = 5$$

के एक से अधिक हल हैं, तो $q - p$ बराबर है :

Options :

40503627568. 2

40503627569. -2

40503627570. 4

40503627571. -4

Question Number : 4 Question Id : 4050367546 Question Type : MCQ Option Shuffling : Yes Display Question Number : Yes Is Question Mandatory : No Single Line Question Option : No Option Orientation : Vertical

Correct Marks : 4 Wrong Marks : 1

ने समीकरण संघति

$$2x + y + pz = -1$$

$$3x - 2y + z = q$$

$$5x - 8y + 9z = 5$$

ने एक कस्तां वधु उकेलो लोय, तो $q - p = \underline{\hspace{2cm}}$.

Options :



collegedunia.com

India's largest Student Review Platform

40503627568. 2

40503627569. -2

40503627570. 4

40503627571. -4

Question Number : 5 Question Id : 4050367547 Question Type : MCQ Option Shuffling : Yes Display Question Number : Yes Is Question Mandatory : No Single Line Question Option : No Option Orientation : Vertical

Correct Marks : 4 Wrong Marks : 1

All the words (with or without meaning) formed using all the five letters of the word GOING are arranged as in dictionary. Then the word OGGIN occurs at the place which is :

Options :

40503627572. (48)th

40503627573. (49)th

40503627574. (50)th

40503627575. (51)th



collegedunia.com

India's largest Student Review Platform

Question Number : 5 Question Id : 4050367547 Question Type : MCQ Option Shuffling : Yes Display Question Number : Yes Is Question Mandatory : No Single Line Question Option : No Option Orientation : Vertical

Correct Marks : 4 Wrong Marks : 1

शब्द GOING के सभी 5 अक्षरों का प्रयोग करते हुए बनाए गए सभी शब्द (चाहे वे अर्थहीन हों या अर्थ वाले हों), शब्दकोश के अनुसार व्यवस्थित किए गए हैं, तो शब्द OGGIN निम्न में से किस स्थान पर आएगा ?

Options :

40503627572. (48) वां

40503627573. (49) वां

40503627574. (50) वां

40503627575. (51) वां

Question Number : 5 Question Id : 4050367547 Question Type : MCQ Option Shuffling : Yes Display Question Number : Yes Is Question Mandatory : No Single Line Question Option : No Option Orientation : Vertical

Correct Marks : 4 Wrong Marks : 1

GOING शब्दना पांथेय अक्षरानो उपयोग करीने बनता तमाम शब्दने (अर्थसभर के अर्थरहित) शब्दकोश प्रमाणे गोलवतां, OGGIN शब्द क्या स्थाने आवे?

Options :

40503627572. 48^{वां}

40503627573. 49^{वां}

40503627574. 50^{वां}



collegedunia.com
India's largest Student Review Platform

40503627575. 51th

Question Number : 6 Question Id : 4050367548 Question Type : MCQ Option Shuffling : Yes Display Question Number : Yes Is Question Mandatory : No Single Line Question Option : No Option Orientation : Vertical

Correct Marks : 4 Wrong Marks : 1

The sum

$$-\frac{2}{3} + \frac{2}{9^2} + \frac{10}{9^3} + \frac{18}{9^4} + \frac{26}{9^5} + \dots \text{upto}$$

infinity, is equal to :

Options :

40503627576. $-\frac{5}{8}$

40503627577. $\frac{17}{24}$

40503627578. $-\frac{11}{24}$

40503627579. $\frac{5}{8}$

Question Number : 6 Question Id : 4050367548 Question Type : MCQ Option Shuffling : Yes Display Question Number : Yes Is Question Mandatory : No Single Line Question Option : No Option Orientation : Vertical

Correct Marks : 4 Wrong Marks : 1



collegedunia

India's largest Student Review Platform

योगफल

$$-\frac{2}{3} + \frac{2}{9^2} + \frac{10}{9^3} + \frac{18}{9^4} + \frac{26}{9^5} + \dots \infty$$

बराबर है :

Options :

40503627576. $-\frac{5}{8}$

40503627577. $\frac{17}{24}$

40503627578. $-\frac{11}{24}$

40503627579. $\frac{5}{8}$

Question Number : 6 Question Id : 4050367548 Question Type : MCQ Option Shuffling : Yes Display Question Number : Yes Is Question Mandatory : No Single Line Question Option : No Option Orientation : Vertical

Correct Marks : 4 Wrong Marks : 1

सरवाणो

$$-\frac{2}{3} + \frac{2}{9^2} + \frac{10}{9^3} + \frac{18}{9^4} + \frac{26}{9^5} + \dots \text{अनंत}$$

पहो सुधी = _____.

Options :

40503627576. $-\frac{5}{8}$



collegedunia.com

India's largest Student Review Platform

$$40503627577. \frac{17}{24}$$

$$40503627578. - \frac{11}{24}$$

$$40503627579. \frac{5}{8}$$

Question Number : 7 Question Id : 4050367549 Question Type : MCQ Option Shuffling : Yes Display Question Number : Yes Is Question Mandatory : No Single Line Question Option : No Option Orientation : Vertical

Correct Marks : 4 Wrong Marks : 1

Let r and s be respectively the remainders when $(12)^{23}$ and $(23)^{12}$ are divided by 5, then $r + s$ is equal to :

Options :

$$40503627580. 5$$

$$40503627581. 4$$

$$40503627582. 3$$

$$40503627583. 2$$



collegedunia.com

India's largest Student Review Platform

Question Number : 7 Question Id : 4050367549 Question Type : MCQ Option Shuffling : Yes Display Question Number : Yes Is Question Mandatory : No Single Line Question Option : No Option Orientation : Vertical

Correct Marks : 4 Wrong Marks : 1

जब $(12)^{23}$ तथा $(23)^{12}$ को 5 से विभाजित किया जाता है तो क्रमशः शेषफल r तथा s हैं, तो $r+s$ बराबर है :

Options :

40503627580. 5

40503627581. 4

40503627582. 3

40503627583. 2

Question Number : 7 Question Id : 4050367549 Question Type : MCQ Option Shuffling : Yes Display Question Number : Yes Is Question Mandatory : No Single Line Question Option : No Option Orientation : Vertical

Correct Marks : 4 Wrong Marks : 1

જો r અને s એ અનુક્રમે $(12)^{23}$ અને $(23)^{12}$ ને 5 વડે ભાગતાં મળતી શેષ હોય, તો $r+s=$ _____.

Options :

40503627580. 5

40503627581. 4

40503627582. 3

40503627583. 2



collegedunia.com

India's largest Student Review Platform

Question Number : 8 Question Id : 4050367550 Question Type : MCQ Option Shuffling : Yes Display Question Number : Yes Is Question Mandatory : No Single Line Question Option : No Option Orientation : Vertical

Correct Marks : 4 Wrong Marks : 1

Let f be a differentiable function satisfying

$f(x+y) = f(x) + f(y) - xy$ for all $x, y \in \mathbf{R}$. If

$\lim_{h \rightarrow 0} \frac{f(h)}{h} = 3$, then $\sum_{n=1}^{10} f(n)$ is equal to :

Options :

40503627584. $-\frac{55}{2}$

40503627585. $\frac{275}{2}$

40503627586. $-\frac{55}{4}$

40503627587. $\frac{225}{4}$

Question Number : 8 Question Id : 4050367550 Question Type : MCQ Option Shuffling : Yes Display Question Number : Yes Is Question Mandatory : No Single Line Question Option : No Option Orientation : Vertical

Correct Marks : 4 Wrong Marks : 1



collegedunia.com

India's largest Student Review Platform

माना f एक अवकलनीय फलन है जो प्रत्येक $x, y \in \mathbb{R}$ के लिए, $f(x+y) = f(x) + f(y) - xy$ को संतुष्ट करता

है। यदि $\lim_{h \rightarrow 0} \frac{f(h)}{h} = 3$ है, तो $\sum_{n=1}^{10} f(n)$ बराबर

है :

Options :

40503627584. $-\frac{55}{2}$

40503627585. $\frac{275}{2}$

40503627586. $-\frac{55}{4}$

40503627587. $\frac{225}{4}$

Question Number : 8 Question Id : 4050367550 Question Type : MCQ Option Shuffling : Yes Display Question Number : Yes Is Question Mandatory : No Single Line Question Option : No Option Orientation : Vertical Correct Marks : 4 Wrong Marks : 1



collegedunia.com

India's largest Student Review Platform

ધારોકે f એ પ્રત્યેક $x, y \in \mathbb{R}$ માટે

$f(x+y) = f(x) + f(y) - xy$ નું સમાધાન કરતું એક

વિકલનીય વિધેય છે. જો $\lim_{h \rightarrow 0} \frac{f(h)}{h} = 3$ હોય, તો

$$\sum_{n=1}^{10} f(n) = \underline{\hspace{2cm}}$$

Options :

40503627584. $-\frac{55}{2}$

40503627585. $\frac{275}{2}$

40503627586. $-\frac{55}{4}$

40503627587. $\frac{225}{4}$

Question Number : 9 Question Id : 4050367551 Question Type : MCQ Option Shuffling : Yes Display Question Number : Yes Is Question Mandatory : No Single Line Question Option : No Option Orientation : Vertical

Correct Marks : 4 Wrong Marks : 1

For non-zero real numbers a, b , if

$$y(x) = \frac{a + bx^{3/2}}{x^{5/4}}, x > 0 \text{ and } y''(5) = 0, \text{ then}$$

the ratio $a : b$ is :

Options :



collegedunia.com

India's largest Student Review Platform

40503627588. $\sqrt{5} : 3$

40503627589. $3 : \sqrt{5}$

40503627590. $\sqrt{5} : \sqrt{3}$

40503627591. $3 : 1$

Question Number : 9 Question Id : 4050367551 Question Type : MCQ Option Shuffling : Yes Display Question Number : Yes Is Question Mandatory : No Single Line Question Option : No Option Orientation : Vertical

Correct Marks : 4 Wrong Marks : 1

शून्येतर वास्तविक संख्याओं a तथा b के लिए यदि

$$y(x) = \frac{a + bx^{3/2}}{x^{5/4}}, x > 0 \text{ तथा } y''(5) = 0 \text{ हैं, तो}$$

अनुपात $a : b$ बराबर है :

Options :

40503627588. $\sqrt{5} : 3$

40503627589. $3 : \sqrt{5}$

40503627590. $\sqrt{5} : \sqrt{3}$

40503627591. $3 : 1$



collegedunia.com

India's largest Student Review Platform

Question Number : 9 Question Id : 4050367551 Question Type : MCQ Option Shuffling : Yes Display Question Number : Yes Is Question

Mandatory : No Single Line Question Option : No Option Orientation : Vertical

Correct Marks : 4 Wrong Marks : 1

$$\text{જો } y(x) = \frac{a + bx^{3/2}}{x^{5/4}}, a, b \in \mathbb{R}, x > 0 \text{ અને}$$

$$y''(5) = 0 \text{ હોય, તો ગુણોત્તર } a : b = \underline{\hspace{2cm}}.$$

Options :

40503627588. $\sqrt{5} : 3$

40503627589. $3 : \sqrt{5}$

40503627590. $\sqrt{5} : \sqrt{3}$

40503627591. $3 : 1$

Question Number : 10 Question Id : 4050367552 Question Type : MCQ Option Shuffling : Yes Display Question Number : Yes Is

Question Mandatory : No Single Line Question Option : No Option Orientation : Vertical

Correct Marks : 4 Wrong Marks : 1

The function $f(x) = \sin 2x + 2\cos x$,

$x \in \left(-\frac{3\pi}{4}, \frac{3\pi}{4}\right)$ has :

Options :

40503627592. no critical point.

40503627593. a point of local maxima and a point of local minima.



collegedunia.com

India's largest Student Review Platform

40503627594. a point of local maxima and a point of inflection.

40503627595. a point of local minima and a point of inflection.

Question Number : 10 Question Id : 4050367552 Question Type : MCQ Option Shuffling : Yes Display Question Number : Yes Is Question Mandatory : No Single Line Question Option : No Option Orientation : Vertical Correct Marks : 4 Wrong Marks : 1

$$\text{फलन } f(x) = \sin 2x + 2\cos x, x \in \left(-\frac{3\pi}{4}, \frac{3\pi}{4}\right)$$

का :

Options :

40503627592. कोई क्रान्तिक बिन्दु नहीं है।

40503627593. एक बिन्दु स्थानीय उच्चिष्ठ है तथा एक बिन्दु स्थानीय निम्निष्ठ है।

40503627594. एक बिन्दु स्थानीय उच्चिष्ठ है तथा एक नतिपरिवर्तन बिन्दु है।

40503627595. एक बिन्दु स्थानीय निम्निष्ठ है तथा एक नतिपरिवर्तन बिन्दु है।



collegedunia.com

India's Largest Student Review Platform

Question Number : 10 Question Id : 4050367552 Question Type : MCQ Option Shuffling : Yes Display Question Number : Yes Is Question Mandatory : No Single Line Question Option : No Option Orientation : Vertical Correct Marks : 4 Wrong Marks : 1

$$\text{વિધેય } f(x) = \sin 2x + 2\cos x, \quad x \in \left(-\frac{3\pi}{4}, \frac{3\pi}{4}\right)$$

ને :

Options :

40503627592. નિર્ણાયક બિંદુ નથી.

40503627593. એક સ્થાનીય મહત્તમ બિંદુ અને એક સ્થાનીય ન્યૂનતમ બિંદુ છે.

40503627594. એક સ્થાનીય મહત્તમ બિંદુ અને એક નતિબિંદુ છે.

40503627595. એક સ્થાનીય ન્યૂનતમ બિંદુ અને એક નતિબિંદુ છે.

Question Number : 11 Question Id : 4050367553 Question Type : MCQ Option Shuffling : Yes Display Question Number : Yes Is Question Mandatory : No Single Line Question Option : No Option Orientation : Vertical Correct Marks : 4 Wrong Marks : 1

The integral $\int \frac{\cos^5 \theta}{\sin \theta (4 - 3 \sin^2 2\theta)} d\theta$ is

equal to :

(where C is a constant of integration)

Options :

40503627596. $\frac{1}{5} \log_e \left| \frac{\cos^5 \theta}{\sin^5 \theta + \cos^5 \theta} \right| + C$



collegedunia.com
India's largest Student Review Platform

40503627597. $\frac{1}{24} \log_e \left(\frac{\sin^6 \theta}{\sin^6 \theta + \cos^6 \theta} \right) + C$

40503627598. $\frac{1}{20} \log_e \left| \frac{\sin^5 \theta}{\sin^5 \theta + \cos^5 \theta} \right| + C$

40503627599. $\frac{1}{6} \log_e \left(\frac{\cos^6 \theta}{\sin^6 \theta + \cos^6 \theta} \right) + C$

Question Number : 11 Question Id : 4050367553 Question Type : MCQ Option Shuffling : Yes Display Question Number : Yes Is Question Mandatory : No Single Line Question Option : No Option Orientation : Vertical

Correct Marks : 4 Wrong Marks : 1

समाकल $\int \frac{\cos^5 \theta}{\sin \theta (4 - 3 \sin^2 2\theta)} d\theta$ बराबर है :

(जहाँ C एक समाकलन अचर है।)

Options :

40503627596. $\frac{1}{5} \log_e \left| \frac{\cos^5 \theta}{\sin^5 \theta + \cos^5 \theta} \right| + C$

40503627597. $\frac{1}{24} \log_e \left(\frac{\sin^6 \theta}{\sin^6 \theta + \cos^6 \theta} \right) + C$

40503627598. $\frac{1}{20} \log_e \left| \frac{\sin^5 \theta}{\sin^5 \theta + \cos^5 \theta} \right| + C$



collegedunia.com

India's largest Student Review Platform

40503627599. $\frac{1}{6} \log_e \left(\frac{\cos^6 \theta}{\sin^6 \theta + \cos^6 \theta} \right) + C$

Question Number : 11 Question Id : 4050367553 Question Type : MCQ Option Shuffling : Yes Display Question Number : Yes Is Question Mandatory : No Single Line Question Option : No Option Orientation : Vertical

Correct Marks : 4 Wrong Marks : 1

સંકલન $\int \frac{\cos^5 \theta}{\sin \theta (4 - 3 \sin^2 2\theta)} d\theta = \underline{\hspace{2cm}}$.

(જ્યાં C એ સંકલનનો અચળાંક છે.)

Options :

40503627596. $\frac{1}{5} \log_e \left| \frac{\cos^5 \theta}{\sin^5 \theta + \cos^5 \theta} \right| + C$

40503627597. $\frac{1}{24} \log_e \left(\frac{\sin^6 \theta}{\sin^6 \theta + \cos^6 \theta} \right) + C$

40503627598. $\frac{1}{20} \log_e \left| \frac{\sin^5 \theta}{\sin^5 \theta + \cos^5 \theta} \right| + C$

40503627599. $\frac{1}{6} \log_e \left(\frac{\cos^6 \theta}{\sin^6 \theta + \cos^6 \theta} \right) + C$



collegedunia.com
India's largest Student Review Platform

Question Number : 12 Question Id : 4050367554 Question Type : MCQ Option Shuffling : Yes Display Question Number : Yes Is

Question Mandatory : No Single Line Question Option : No Option Orientation : Vertical

Correct Marks : 4 Wrong Marks : 1

The area (in sq. units) of the region bounded by the parabola $x = 2y^2$ and the line $x + y = 1$ is :

Options :

40503627600. $\frac{11}{12}$

40503627601. $\frac{13}{24}$

40503627602. $\frac{9}{8}$

40503627603. $\frac{5}{4}$

Question Number : 12 Question Id : 4050367554 Question Type : MCQ Option Shuffling : Yes Display Question Number : Yes Is

Question Mandatory : No Single Line Question Option : No Option Orientation : Vertical

Correct Marks : 4 Wrong Marks : 1

परवलय, $x = 2y^2$ तथा रेखा, $x + y = 1$ द्वारा परिवद्ध क्षेत्र का क्षेत्रफल (वर्ग इकाइयों में) है :

Options :

40503627600. $\frac{11}{12}$



collegedunia.com
India's largest Student Review Platform

40503627601. $\frac{13}{24}$

40503627602. $\frac{9}{8}$

40503627603. $\frac{5}{4}$

Question Number : 12 Question Id : 4050367554 Question Type : MCQ Option Shuffling : Yes Display Question Number : Yes Is Question Mandatory : No Single Line Question Option : No Option Orientation : Vertical Correct Marks : 4 Wrong Marks : 1

પરવલય $x = 2y^2$ અને રેખા $x + y = 1$ વડે આવૃત્ત પ્રદેશનું ક્ષેત્રફળ (ચો. એકમમાં) _____ છે.

Options :

40503627600. $\frac{11}{12}$

40503627601. $\frac{13}{24}$

40503627602. $\frac{9}{8}$

40503627603. $\frac{5}{4}$



collegedunia.com
India's largest Student Review Platform

Question Number : 13 Question Id : 4050367555 Question Type : MCQ Option Shuffling : Yes Display Question Number : Yes Is Question Mandatory : No Single Line Question Option : No Option Orientation : Vertical Correct Marks : 4 Wrong Marks : 1

Let $y = y(x)$ be the solution of the differential

equation $x \log_e x \frac{dy}{dx} + 2y = 2x$ ($x > 1$). If

$\lim_{x \rightarrow 1^+} y(x) = 1$, then $y(e^2)$ is equal to :

Options :

40503627604. $\frac{e^2 - 1}{2}$

40503627605. $\frac{e^2 + 1}{2}$

40503627606. $e^2 - 1$

40503627607. $e^2 + 1$

Question Number : 13 Question Id : 4050367555 Question Type : MCQ Option Shuffling : Yes Display Question Number : Yes Is Question Mandatory : No Single Line Question Option : No Option Orientation : Vertical Correct Marks : 4 Wrong Marks : 1

माना $y = y(x)$, अवकल समीकरण,

$x \log_e x \frac{dy}{dx} + 2y = 2x$ ($x > 1$) का हल है। यदि

$\lim_{x \rightarrow 1^+} y(x) = 1$ है, तो $y(e^2)$ बराबर है :

Options :



collegedunia.com

India's largest Student Review Platform

40503627604. $\frac{e^2 - 1}{2}$

40503627605. $\frac{e^2 + 1}{2}$

40503627606. $e^2 - 1$

40503627607. $e^2 + 1$

Question Number : 13 Question Id : 4050367555 Question Type : MCQ Option Shuffling : Yes Display Question Number : Yes Is Question Mandatory : No Single Line Question Option : No Option Orientation : Vertical

Correct Marks : 4 Wrong Marks : 1

ધારોકે $y = y(x)$ એ વિકલ સમીકરણ

$x \log_e x \frac{dy}{dx} + 2y = 2x$ ($x > 1$) નો ઉકેલ છે. જો

$\lim_{x \rightarrow 1^+} y(x) = 1$ હોય, તો $y(e^2) = \underline{\hspace{2cm}}$.

Options :

40503627604. $\frac{e^2 - 1}{2}$

40503627605. $\frac{e^2 + 1}{2}$

40503627606. $e^2 - 1$



collegedunia.com

India's largest Student Review Platform

40503627607. $e^2 + 1$

Question Number : 14 Question Id : 4050367556 Question Type : MCQ Option Shuffling : Yes Display Question Number : Yes Is Question Mandatory : No Single Line Question Option : No Option Orientation : Vertical

Correct Marks : 4 Wrong Marks : 1

If $(x_i, y_i), i=1, 2, 3$ are the vertices of an equilateral triangle such that

$$(x_1 + 3)^2 + (y_1 - 4)^2 = (x_2 + 3)^2 + (y_2 - 4)^2 = (x_3 + 3)^2 + (y_3 - 4)^2,$$
 then the value of

$$\frac{y_1 + y_2 + y_3}{x_1 + x_2 + x_3}$$
 is :

Options :

40503627608. $\frac{4}{3}$

40503627609. $-\frac{4}{3}$

40503627610. $\frac{3}{4}$

40503627611. $-\frac{3}{4}$

Question Number : 14 Question Id : 4050367556 Question Type : MCQ Option Shuffling : Yes Display Question Number : Yes Is Question Mandatory : No Single Line Question Option : No Option Orientation : Vertical  **India's largest Student Review Platform**
Correct Marks : 4 Wrong Marks : 1

यदि एक समबाहु त्रिभुज के शीर्ष बिन्दु (x_i, y_i) , $i = 1, 2, 3$ हैं जिनके लिए

$$(x_1 + 3)^2 + (y_1 - 4)^2 = (x_2 + 3)^2 + (y_2 - 4)^2 =$$

$$(x_3 + 3)^2 + (y_3 - 4)^2 \text{ है, तो } \frac{y_1 + y_2 + y_3}{x_1 + x_2 + x_3} \text{ का}$$

मान है :

Options :

40503627608. $\frac{4}{3}$

40503627609. $-\frac{4}{3}$

40503627610. $\frac{3}{4}$

40503627611. $-\frac{3}{4}$

Question Number : 14 Question Id : 4050367556 Question Type : MCQ Option Shuffling : Yes Display Question Number : Yes Is Question Mandatory : No Single Line Question Option : No Option Orientation : Vertical Correct Marks : 4 Wrong Marks : 1



collegedunia.com
India's largest Student Review Platform

જો $(x_i, y_i), i=1, 2, 3$ એ એક સમબાજુ ત્રિકોણનાં
એવાં શિરોબિંદુઓ છે કે જેથી

$$(x_1 + 3)^2 + (y_1 - 4)^2 = (x_2 + 3)^2 + (y_2 - 4)^2 =$$

$$(x_3 + 3)^2 + (y_3 - 4)^2 \text{ થાય, તો } \frac{y_1 + y_2 + y_3}{x_1 + x_2 + x_3} \text{ ની}$$

કિંમત _____ છે.

Options :

40503627608. $\frac{4}{3}$

40503627609. $-\frac{4}{3}$

40503627610. $\frac{3}{4}$

40503627611. $-\frac{3}{4}$

Question Number : 15 Question Id : 4050367557 Question Type : MCQ Option Shuffling : Yes Display Question Number : Yes Is
Question Mandatory : No Single Line Question Option : No Option Orientation : Vertical
Correct Marks : 4 Wrong Marks : 1

If tangent at $\left(\frac{1}{\sqrt{2}}, \frac{1}{\sqrt{2}}\right)$ to the circle

$x^2 + y^2 = 1$ is also a tangent to the circle
 $(x - a)^2 + (y - b)^2 = 1$, then the ordered pair
(a, b) can be :



collegedunia.com

India's largest Student Review Platform

Options :

40503627612. $(-2, \sqrt{2})$

40503627613. $(-\sqrt{2}, 2\sqrt{2})$

40503627614. $(2, -2\sqrt{2})$

40503627615. $(-\sqrt{2}, \sqrt{2})$

Question Number : 15 Question Id : 4050367557 Question Type : MCQ Option Shuffling : Yes Display Question Number : Yes Is

Question Mandatory : No Single Line Question Option : No Option Orientation : Vertical

Correct Marks : 4 Wrong Marks : 1

यदि वृत्त $x^2 + y^2 = 1$ के बिन्दु $\left(\frac{1}{\sqrt{2}}, \frac{1}{\sqrt{2}}\right)$ पर स्पर्श

रेखा वृत्त, $(x - a)^2 + (y - b)^2 = 1$ को भी स्पर्श करती है, तो क्रमित युग्म (a, b) हो सकता है :

Options :

40503627612. $(-2, \sqrt{2})$

40503627613. $(-\sqrt{2}, 2\sqrt{2})$

40503627614. $(2, -2\sqrt{2})$



collegedunia.com

India's largest Student Review Platform

40503627615. $(-\sqrt{2}, \sqrt{2})$

Question Number : 15 Question Id : 4050367557 Question Type : MCQ Option Shuffling : Yes Display Question Number : Yes Is Question Mandatory : No Single Line Question Option : No Option Orientation : Vertical Correct Marks : 4 Wrong Marks : 1

જો વર્તુળ $x^2 + y^2 = 1$ ને બિંદુ $(\frac{1}{\sqrt{2}}, \frac{1}{\sqrt{2}})$ આગળનો

સ્પર્શક, એ વર્તુળ $(x - a)^2 + (y - b)^2 = 1$ નો પણ સ્પર્શક હોય, તો ક્રમયુક્ત જોડ $(a, b) =$ _____ હોઈ શકે.

Options :

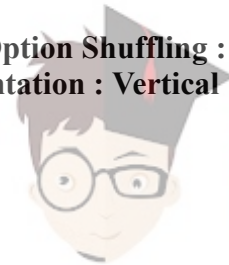
40503627612. $(-2, \sqrt{2})$

40503627613. $(-\sqrt{2}, 2\sqrt{2})$

40503627614. $(2, -2\sqrt{2})$

40503627615. $(-\sqrt{2}, \sqrt{2})$

Question Number : 16 Question Id : 4050367558 Question Type : MCQ Option Shuffling : Yes Display Question Number : Yes Is Question Mandatory : No Single Line Question Option : No Option Orientation : Vertical Correct Marks : 4 Wrong Marks : 1



collegedunia.com

India's largest Student Review Platform

The foci of a hyperbola coincide with the foci of the ellipse, $\frac{x^2}{16} + \frac{y^2}{9} = 1$. If the eccentricity of the hyperbola is 4, then its equation is :

Options :

40503627616. $\frac{x^2}{7} - \frac{4y^2}{105} = \frac{1}{4}$

40503627617. $\frac{x^2}{7} - \frac{y^2}{105} = \frac{1}{16}$

40503627618. $\frac{x^2}{20} - \frac{y^2}{75} = \frac{1}{16}$

40503627619. $\frac{x^2}{5} - \frac{y^2}{75} = \frac{1}{16}$

Question Number : 16 Question Id : 4050367558 Question Type : MCQ Option Shuffling : Yes Display Question Number : Yes Is Question Mandatory : No Single Line Question Option : No Option Orientation : Vertical Correct Marks : 4 Wrong Marks : 1

एक अतिपरवलय के नाभि केन्द्र, दीर्घवृत्त, $\frac{x^2}{16} + \frac{y^2}{9} = 1$ के नाभिकेन्द्रों के समान हैं। यदि अतिपरवलय की उत्केन्द्रता 4 है, तो इसका समीकरण है :



collegedunia.com
India's largest Student Review Platform

Options :

40503627616. $\frac{x^2}{7} - \frac{4y^2}{105} = \frac{1}{4}$

40503627617. $\frac{x^2}{7} - \frac{y^2}{105} = \frac{1}{16}$

40503627618. $\frac{x^2}{20} - \frac{y^2}{75} = \frac{1}{16}$

40503627619. $\frac{x^2}{5} - \frac{y^2}{75} = \frac{1}{16}$

Question Number : 16 Question Id : 4050367558 Question Type : MCQ Option Shuffling : Yes Display Question Number : Yes Is Question Mandatory : No Single Line Question Option : No Option Orientation : Vertical

Correct Marks : 4 Wrong Marks : 1

એક અતિવલયની નાભિઓ એ, ઉપવલય

$\frac{x^2}{16} + \frac{y^2}{9} = 1$ ની નાભિઓ સાથે સંપાતિ છે. જો

આ અતિવલયની ઉત્કેન્દ્રતા 4 હોય, તો તેનું સમીકરણ _____ છે.

Options :

40503627616. $\frac{x^2}{7} - \frac{4y^2}{105} = \frac{1}{4}$



collegedunia.com

India's largest Student Review Platform

40503627617. $\frac{x^2}{7} - \frac{y^2}{105} = \frac{1}{16}$

40503627618. $\frac{x^2}{20} - \frac{y^2}{75} = \frac{1}{16}$

40503627619. $\frac{x^2}{5} - \frac{y^2}{75} = \frac{1}{16}$

Question Number : 17 Question Id : 4050367559 Question Type : MCQ Option Shuffling : Yes Display Question Number : Yes Is Question Mandatory : No Single Line Question Option : No Option Orientation : Vertical

Correct Marks : 4 Wrong Marks : 1

If the plane P : $2x - y + 3z + 5 = 0$ is rotated through 90° about its line of intersection with the plane $5x - 4y - 2z + 1 = 0$, then the equation of the plane P in the new position is :

Options :

40503627620. $27x - 24y - 26z + 13 = 0$

40503627621. $27x - 24y - 26z - 13 = 0$

40503627622. $31x + 2y - 20z - 13 = 0$

40503627623. $31x - 25y + 29z + 13 = 0$



collegedunia.com
India's largest Student Review Platform

Question Number : 17 Question Id : 4050367559 Question Type : MCQ Option Shuffling : Yes Display Question Number : Yes Is

Question Mandatory : No Single Line Question Option : No Option Orientation : Vertical

Correct Marks : 4 Wrong Marks : 1

यदि समतल $P : 2x - y + 3z + 5 = 0$ को समतल $5x - 4y - 2z + 1 = 0$ तथा समतल P की प्रतिच्छेदन रेखा के सापेक्ष 90° के कोण पर घुमाया जाता है, तो नयी स्थिति में समतल P का समीकरण है :

Options :

40503627620. $27x - 24y - 26z + 13 = 0$

40503627621. $27x - 24y - 26z - 13 = 0$

40503627622. $31x + 2y - 20z - 13 = 0$

40503627623. $31x - 25y + 29z + 13 = 0$

Question Number : 17 Question Id : 4050367559 Question Type : MCQ Option Shuffling : Yes Display Question Number : Yes Is

Question Mandatory : No Single Line Question Option : No Option Orientation : Vertical

Correct Marks : 4 Wrong Marks : 1

जे समतल $P : 2x - y + 3z + 5 = 0$ ने तेनी समतल $5x - 4y - 2z + 1 = 0$ साथेनी छेद रेखानी सापेक्षे 90° थी परिव्रमण करायवामां आवे, तो आ नवी स्थितिमां समतल P नुं समीकरण क्युं थाय?

Options :

40503627620. $27x - 24y - 26z + 13 = 0$

40503627621. $27x - 24y - 26z - 13 = 0$



collegedunia.com

India's largest Student Review Platform

40503627622. $31x + 2y - 20z - 13 = 0$

40503627623. $31x - 25y + 29z + 13 = 0$

Question Number : 18 Question Id : 4050367560 Question Type : MCQ Option Shuffling : Yes Display Question Number : Yes Is Question Mandatory : No Single Line Question Option : No Option Orientation : Vertical

Correct Marks : 4 Wrong Marks : 1

The top of two poles, standing 4 m apart on a horizontal plane, are connected by a cable. If the angles of depression from the top of one pole to the bottom of another pole are 30° and 45° , then the minimum length (in m) of the cable is :

Options :

40503627624. $\sqrt{\frac{32\sqrt{3} - 16}{3}}$

40503627625. $\sqrt{\frac{128 - 32\sqrt{3}}{3}}$

40503627626. $\sqrt{\frac{122 - 32\sqrt{3}}{3}}$

40503627627. $\sqrt{\frac{112 - 32\sqrt{3}}{3}}$



Question Number : 18 Question Id : 4050367560 Question Type : MCQ Option Shuffling : Yes Display Question Number : Yes Is Question Mandatory : No Single Line Question Option : No Option Orientation : Vertical Correct Marks : 4 Wrong Marks : 1

क्षैतिज तल पर दो खम्बे 4 मीटर की दूरी पर सीधे खड़े हैं जिनके शिखरों को एक केबल (cable) द्वारा जोड़ा गया है। यदि एक खम्बे के शिखर का दूसरे खम्बे के पाद से अवनमन कोण 30° तथा 45° हैं तो केबल की न्यूनतम लम्बाई (मी. में) है :

Options :

40503627624. $\sqrt{\frac{32\sqrt{3} - 16}{3}}$

40503627625. $\sqrt{\frac{128 - 32\sqrt{3}}{3}}$

40503627626. $\sqrt{\frac{122 - 32\sqrt{3}}{3}}$

40503627627. $\sqrt{\frac{112 - 32\sqrt{3}}{3}}$

Question Number : 18 Question Id : 4050367560 Question Type : MCQ Option Shuffling : Yes Display Question Number : Yes Is Question Mandatory : No Single Line Question Option : No Option Orientation : Vertical Correct Marks : 4 Wrong Marks : 1



એક સમક્ષિતિજ સમતલ પર એક બીજથી 4 મી. અંતરે ઉભેલા બે થાંભલાઓની ટોચને એક તારથી જોડેલ છે. જો એક થાંભલાની ટોચથી બીજા થાંભલાના તળીયાના અવસેધકોણ 30° અને 45° હોય, તો તારની ન્યૂનતમ લંબાઈ (મીટર માં) _____ હોય.

Options :

40503627624. $\sqrt{\frac{32\sqrt{3} - 16}{3}}$

40503627625. $\sqrt{\frac{128 - 32\sqrt{3}}{3}}$

40503627626. $\sqrt{\frac{122 - 32\sqrt{3}}{3}}$

40503627627. $\sqrt{\frac{112 - 32\sqrt{3}}{3}}$

Question Number : 19 Question Id : 4050367561 Question Type : MCQ Option Shuffling : Yes Display Question Number : Yes Is Question Mandatory : No Single Line Question Option : No Option Orientation : Vertical Correct Marks : 4 Wrong Marks : 1



collegedunia.com
India's largest Student Review Platform

Let A, B and C be three events such that the probability of occurrence of exactly one of A and B is $\frac{1}{2}$, the probability of occurrence of exactly one of B and C is $\frac{3}{4}$ and the probability of occurrence of exactly one of C and A is $\frac{1}{4}$. If the probability of occurrence of all the three events simultaneously is $\frac{1}{16}$, then the probability that at least one of the three events will occur is :

Options :

40503627628. $\frac{7}{16}$

40503627629. $\frac{13}{16}$

40503627630. $\frac{7}{8}$

40503627631. $\frac{15}{16}$



collegedunia.com
India's largest Student Review Platform

Question Mandatory : No Single Line Question Option : No Option Orientation : Vertical

Correct Marks : 4 Wrong Marks : 1

माना तीन घटनायें A, B तथा C इस प्रकार हैं कि

A तथा B में से मात्र एक के होने की प्रायिकता $\frac{1}{2}$ है,

B तथा C में से मात्र एक के होने की प्रायिकता $\frac{3}{4}$ है,

और C तथा A में से मात्र एक के होने की प्रायिकता $\frac{1}{4}$

है। यदि तीनों घटनाओं के एक साथ होने की प्रायिकता

$\frac{1}{16}$ है, तो इन तीनों घटनाओं में से कम से कम एक के

होने की प्रायिकता है :

Options :

40503627628. $\frac{7}{16}$

40503627629. $\frac{13}{16}$

40503627630. $\frac{7}{8}$

40503627631. $\frac{15}{16}$



collegedunia.com

India's largest Student Review Platform

Question Number : 19 Question Id : 4050367561 Question Type : MCQ Option Shuffling : Yes Display Question Number : Yes Is

Question Mandatory : No Single Line Question Option : No Option Orientation : Vertical

Correct Marks : 4 Wrong Marks : 1

ધારો કે A, B અને C એ એવી ત્રણ ઘટનાઓ છે કે જેથી A અને B માંથી બરાબર એકજ ઘટના બને તેની સંભાવના $\frac{1}{2}$, B અને C માંથી બરાબર એકજ ઘટના બને તેની સંભાવના $\frac{3}{4}$ તથા C અને A માંથી બરાબર એકજ ઘટના બને તેની સંભાવના $\frac{1}{4}$ છે. જો આ ત્રણેય ઘટનાઓ એક સાથે બને તેની સંભાવના $\frac{1}{16}$ હોય, તો આ ત્રણ માંથી ઓછામાં ઓછી એક ઘટના બને તેની સંભાવના _____ છે.

Options :

40503627628. $\frac{7}{16}$

40503627629. $\frac{13}{16}$

40503627630. $\frac{7}{8}$

40503627631. $\frac{15}{16}$



collegedunia.com

India's largest Student Review Platform

Question Number : 20 Question Id : 4050367562 Question Type : MCQ Option Shuffling : Yes Display Question Number : Yes Is Question Mandatory : No Single Line Question Option : No Option Orientation : Vertical Correct Marks : 4 Wrong Marks : 1

Let

p : I have passed JEE (Main),

q : My JEE (Main) rank is 100, and

r : I will appear in JEE (Advanced)

be three statements with truth values T, F and T respectively. Then which one of the following has the truth value, F ?

Options :

40503627632. $(\sim p \vee \sim q) \wedge r$

40503627633. $(p \wedge \sim q) \vee (\sim r)$

40503627634. $(\sim p \vee q) \wedge (\sim r)$

40503627635. $(\sim p \wedge q) \vee r$

Question Number : 20 Question Id : 4050367562 Question Type : MCQ Option Shuffling : Yes Display Question Number : Yes Is Question Mandatory : No Single Line Question Option : No Option Orientation : Vertical Correct Marks : 4 Wrong Marks : 1



collegedunia.com
India's largest Student Review Platform

माना

p : मैंने JEE (Main) पास कर लिया है,

q : मेरा JEE (Main) में रैंक (Rank) 100 है तथा

r : मैं JEE (Advanced) की परीक्षा दूंगा

तीन कथन हैं, जिनके सत्यमान क्रमशः T, F तथा T हैं।

तो निम्न में से किसका सत्यमान F है?

Options :

40503627632. $(\sim p \vee \sim q) \wedge r$

40503627633. $(p \wedge \sim q) \vee (\sim r)$

40503627634. $(\sim p \vee q) \wedge (\sim r)$

40503627635. $(\sim p \wedge q) \vee r$

Question Number : 20 Question Id : 4050367562 Question Type : MCQ Option Shuffling : Yes Display Question Number : Yes Is

Question Mandatory : No Single Line Question Option : No Option Orientation : Vertical

Correct Marks : 4 Wrong Marks : 1

ધારોકે

p : મેં JEE (Main) ઉત્તિર્ણ કરી છે.

q : મારો JEE (Main) નો ઉત્તિર્ણ ક્રમાંક 100 છે. અને

r : હું JEE (Advanced) માં ભાગ લઈશ.

એ જ્ઞેનાં સત્યાર્થતા મૂલ્યો અનુક્રમે T, F અને T હોય

એવાં ત્રણ વિધાનો છે. તો નીચેના પૈકી કોનું સત્યાર્થતા

મૂલ્ય F છે?



collegedunia.com

India's largest Student Review Platform

Options :

40503627632. $(\sim p \vee \sim q) \wedge r$

40503627633. $(p \wedge \sim q) \vee (\sim r)$

40503627634. $(\sim p \vee q) \wedge (\sim r)$

40503627635. $(\sim p \wedge q) \vee r$

Sub-Section Number :

2

Sub-Section Id :

405036552

Question Shuffling Allowed :

Yes

**Question Number : 21 Question Id : 4050367563 Question Type : SA Display Question Number : Yes
Correct Marks : 4 Wrong Marks : 0**

Let $B = \begin{bmatrix} 22 & -26 \\ -6 & 10 \end{bmatrix}$ be the matrix obtained

by applying the elementary row operations

$R_2 \rightarrow R_2 - R_1$, $R_1 \rightarrow 2R_1$ and

$R_1 \rightarrow R_1 - 2R_2$ (in this order only) on a

matrix A. Then the sum of all entries of A is _____.

Response Type : Numeric

Evaluation Required For SA : Yes

Show Word Count : Yes

Answers Type : Range

Text Areas : PlainText

Possible Answers :



collegedunia.com

India's largest Student Review Platform

5 to 5.002

Question Number : 21 Question Id : 4050367563 Question Type : SA Display Question Number : Yes

Correct Marks : 4 Wrong Marks : 0

यदि आव्यूह A पर प्रारम्भिक पंक्ति संक्रियाओं

$$R_2 \rightarrow R_2 - R_1, \quad R_1 \rightarrow 2R_1 \quad \text{तथा}$$

$R_1 \rightarrow R_1 - 2R_2$ (केवल इसी क्रम में) के प्रयोग से

आव्यूह $B = \begin{bmatrix} 22 & -26 \\ -6 & 10 \end{bmatrix}$ प्राप्त होता है, तो A के

सभी अवयवों (entries) का योगफल है _____ ।

Response Type : Numeric

Evaluation Required For SA : Yes

Show Word Count : Yes

Answers Type : Range

Text Areas : PlainText

Possible Answers :

5 to 5.002

Question Number : 21 Question Id : 4050367563 Question Type : SA Display Question Number : Yes

Correct Marks : 4 Wrong Marks : 0

श्रेणीक A ઉપર પ્રાથમિક હાર-પ્રક્રિયાઓ

$$R_2 \rightarrow R_2 - R_1, \quad R_1 \rightarrow 2R_1 \quad \text{અને}$$

$R_1 \rightarrow R_1 - 2R_2$ (આ ક્રમમાં જ) કરતાં શ્રેણીક

$B = \begin{bmatrix} 22 & -26 \\ -6 & 10 \end{bmatrix}$ મળે છે. તો શ્રેણીક A નાં બધા

ઘટકોનો સરવાળો = _____ થાય.

Response Type : Numeric

Evaluation Required For SA : Yes



collegedunia.com

India's largest Student Review Platform

Show Word Count : Yes

Answers Type : Range

Text Areas : PlainText

Possible Answers :

5 to 5.002

Question Number : 22 **Question Id :** 4050367564 **Question Type :** SA Display **Question Number :** Yes

Correct Marks : 4 **Wrong Marks :** 0

For $b \in \mathbb{N}$, if the limit of the function

$$f(x) = \begin{cases} [5x - 4], & x < 4 \\ \frac{[x + b]}{2}, & x > 4 \end{cases}$$

when $x \rightarrow 4$, exists and $[t]$ denotes the greatest integer $\leq t$, then b is equal to

_____.

Response Type : Numeric

Evaluation Required For SA : Yes

Show Word Count : Yes

Answers Type : Range

Text Areas : PlainText

Possible Answers :

5 to 5.002

Question Number : 22 **Question Id :** 4050367564 **Question Type :** SA Display **Question Number :** Yes

Correct Marks : 4 **Wrong Marks :** 0



collegedunia.com

India's largest Student Review Platform

$b \in \mathbb{N}$ के लिये, फलन $f(x) = \begin{cases} [5x - 4], & x < 4 \\ \frac{[x + b]}{2}, & x > 4 \end{cases}$

की सीमा जबकि $x \rightarrow 4$ है का अस्तित्व है और $[t]$ महत्तम पूर्णांक $\leq t$ को दर्शाता है, तो b बराबर है _____।

Response Type : Numeric

Evaluation Required For SA : Yes

Show Word Count : Yes

Answers Type : Range

Text Areas : PlainText

Possible Answers :

5 to 5.002

Question Number : 22 **Question Id :** 4050367564 **Question Type :** SA **Display Question Number :** Yes

Correct Marks : 4 **Wrong Marks :** 0

जे $b \in \mathbb{N}$, माटे विधेय $f(x) = \begin{cases} [5x - 4], & x < 4 \\ \frac{[x + b]}{2}, & x > 4 \end{cases}$

नुं लक्ष $x \rightarrow 4$ माटे अस्तित्व धरावे, ज्यां $[t]$ महत्तम पूर्णांक $\leq t$ दर्शावे छे, तो $b =$ _____ थाय.

Response Type : Numeric

Evaluation Required For SA : Yes

Show Word Count : Yes

Answers Type : Range

Text Areas : PlainText

Possible Answers :

5 to 5.002



collegedunia.com

India's largest Student Review Platform

Question Number : 23 Question Id : 4050367565 Question Type : SA Display Question Number : Yes

Correct Marks : 4 Wrong Marks : 0

If $S = \{x \in [0, 4\pi] : \sin 2x - \cos x = 0\}$ and the sum of the elements of S is $k\pi$, then k is equal to _____.

Response Type : Numeric

Evaluation Required For SA : Yes

Show Word Count : Yes

Answers Type : Range

Text Areas : PlainText

Possible Answers :

5 to 5.002

Question Number : 23 Question Id : 4050367565 Question Type : SA Display Question Number : Yes

Correct Marks : 4 Wrong Marks : 0

यदि $S = \{x \in [0, 4\pi] : \sin 2x - \cos x = 0\}$ है तथा समुच्चय S के सभी अवयवों का योगफल $k\pi$ है, तो k बराबर है _____।

Response Type : Numeric

Evaluation Required For SA : Yes

Show Word Count : Yes

Answers Type : Range

Text Areas : PlainText

Possible Answers :

5 to 5.002

Question Number : 23 Question Id : 4050367565 Question Type : SA Display Question Number : Yes

Correct Marks : 4 Wrong Marks : 0



collegedunia.com

India's Largest Student Review Platform

જો $S = \{x \in [0, 4\pi] : \sin 2x - \cos x = 0\}$ હોય અને
S નાં ઘટકોનો સરવાળો $k\pi$ થતો હોય તો
 $k = \underline{\hspace{2cm}}$ થાય.

Response Type : Numeric

Evaluation Required For SA : Yes

Show Word Count : Yes

Answers Type : Range

Text Areas : PlainText

Possible Answers :

5 to 5.002

Question Number : 24 **Question Id :** 4050367566 **Question Type :** SA Display **Question Number :** Yes

Correct Marks : 4 **Wrong Marks :** 0

If the mean of the numbers

$-7, -5, -2, x, 5$ is -1 , then the variance
of the numbers $x - 3, 4x, x + 3$ is $\underline{\hspace{2cm}}$.

Response Type : Numeric

Evaluation Required For SA : Yes

Show Word Count : Yes

Answers Type : Range

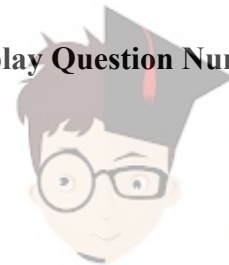
Text Areas : PlainText

Possible Answers :

5 to 5.002

Question Number : 24 **Question Id :** 4050367566 **Question Type :** SA Display **Question Number :** Yes

Correct Marks : 4 **Wrong Marks :** 0



collegedunia.com

India's largest Student Review Platform

यदि संख्याओं $-7, -5, -2, x, 5$ का माध्य -1 है,
तो संख्याओं $x-3, 4x, x+3$ का प्रसरण है
_____।

Response Type : Numeric

Evaluation Required For SA : Yes

Show Word Count : Yes

Answers Type : Range

Text Areas : PlainText

Possible Answers :

5 to 5.002

Question Number : 24 **Question Id :** 4050367566 **Question Type :** SA **Display Question Number :** Yes

Correct Marks : 4 **Wrong Marks :** 0

जे संख्याओ $-7, -5, -2, x, 5$ नो मध्यक -1 होय
तो $x-3, 4x, x+3$ नुं विचरणा _____ थाय.

Response Type : Numeric

Evaluation Required For SA : Yes

Show Word Count : Yes

Answers Type : Range

Text Areas : PlainText

Possible Answers :

5 to 5.002

Question Number : 25 **Question Id :** 4050367567 **Question Type :** SA **Display Question Number :** Yes

Correct Marks : 4 **Wrong Marks :** 0



collegedunia.com

India's largest Student Review Platform

If the equation of a plane P passing through the point $\hat{i} + \hat{j} + \hat{k}$ is $\vec{r} \cdot (2\hat{i} - \hat{j} + a\hat{k}) = 3$, then the length of the perpendicular from the point $4\hat{i} - \hat{j} + 3\hat{k}$ on the plane P is _____.

Response Type : Numeric

Evaluation Required For SA : Yes

Show Word Count : Yes

Answers Type : Range

Text Areas : PlainText

Possible Answers :

5 to 5.002

Question Number : 25 **Question Id :** 4050367567 **Question Type :** SA **Display Question Number :** Yes

Correct Marks : 4 **Wrong Marks :** 0

यदि एक समतल P, जो बिन्दु $\hat{i} + \hat{j} + \hat{k}$ से होकर

जाता है का समीकरण $\vec{r} \cdot (2\hat{i} - \hat{j} + a\hat{k}) = 3$ है,

तो बिन्दु $4\hat{i} - \hat{j} + 3\hat{k}$ से समतल P पर डाले गए लम्ब की लम्बाई है _____।

Response Type : Numeric

Evaluation Required For SA : Yes

Show Word Count : Yes

Answers Type : Range



collegedunia.com

India's largest Student Review Platform

Text Areas : PlainText

Possible Answers :

5 to 5.002

Question Number : 25 Question Id : 4050367567 Question Type : SA Display Question Number : Yes

Correct Marks : 4 Wrong Marks : 0

બિંદુ $\hat{i} + \hat{j} + \hat{k}$ માંથી પસાર થતાં સમતલ P નું

સમીકરણ $\vec{r} \cdot (2\hat{i} - \hat{j} + a\hat{k}) = 3$ હોય, તો બિંદુ

$4\hat{i} - \hat{j} + 3\hat{k}$ માંથી P ઉપર દોરેલ લંબની લંબાઈ
= _____ થાય.

Response Type : Numeric

Evaluation Required For SA : Yes

Show Word Count : Yes

Answers Type : Range

Text Areas : PlainText

Possible Answers :

5 to 5.002

Section Id :

Section Number :

Section type :

Mandatory or Optional :

Number of Questions :

Number of Questions to be attempted :

Section Marks :

Display Number Panel :

Aptitude Test

405036268

2

Online

Mandatory

50

50

200

Yes



collegedunia.com

India's largest Student Review Platform

Group All Questions :

Yes

Mark As Answered Required? :

Yes

Sub-Section Number :

1

Sub-Section Id :

405036553

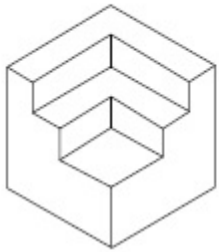
Question Shuffling Allowed :

Yes

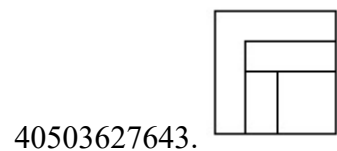
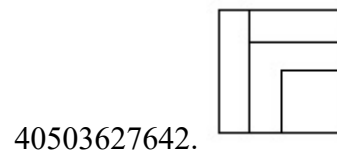
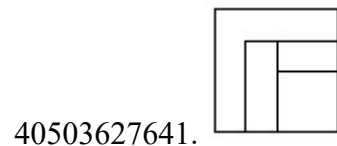
Question Number : 26 Question Id : 4050367568 Question Type : MCQ Option Shuffling : Yes Display Question Number : Yes Is Question Mandatory : No Single Line Question Option : No Option Orientation : Vertical

Correct Marks : 4 Wrong Marks : 1

The 3 - D figure shows the view of an object. Identify the correct top view from amongst the answer figures.



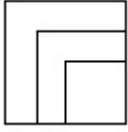
Options :



collegedunia.com

India's largest Student Review Platform

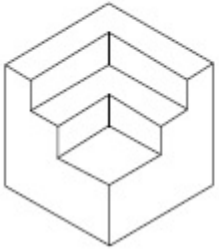
40503627644.



Question Number : 26 Question Id : 4050367568 Question Type : MCQ Option Shuffling : Yes Display Question Number : Yes Is Question Mandatory : No Single Line Question Option : No Option Orientation : Vertical

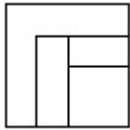
Correct Marks : 4 Wrong Marks : 1

3 - D प्रश्न आकृति में एक वस्तु के एक दृश्य को दिखाया गया है। इसका सही ऊपरी दृश्य, उत्तर आकृतियों में से पहचानिये।

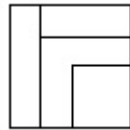


Options :

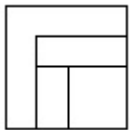
40503627641.



40503627642.



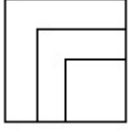
40503627643.



collegedunia.com

India's largest Student Review Platform

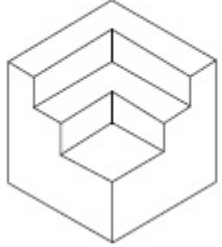
40503627644.



Question Number : 26 Question Id : 4050367568 Question Type : MCQ Option Shuffling : Yes Display Question Number : Yes Is Question Mandatory : No Single Line Question Option : No Option Orientation : Vertical

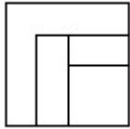
Correct Marks : 4 Wrong Marks : 1

3 - D પ્રશ્ન આકૃતિ એક વસ્તુનું દૃશ્ય બતાવે છે. જવાબ આકૃતિઓમાંથી આનું સાચું ઉપરી દૃશ્ય (top view) શોધો.

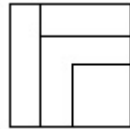


Options :

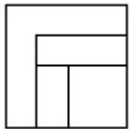
40503627641.



40503627642.



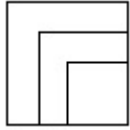
40503627643.



collegedunia.com

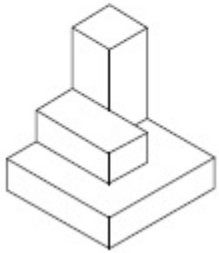
India's largest Student Review Platform

40503627644.



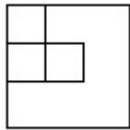
Question Number : 27 Question Id : 4050367569 Question Type : MCQ Option Shuffling : Yes Display Question Number : Yes Is Question Mandatory : No Single Line Question Option : No Option Orientation : Vertical Correct Marks : 4 Wrong Marks : 1

The 3 - D figure shows the view of an object. Identify the correct top view from amongst the answer figures.

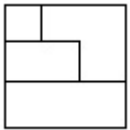


Options :

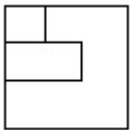
40503627645.



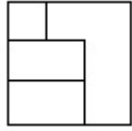
40503627646.



40503627647.



collegedunia.com
India's largest Student Review Platform

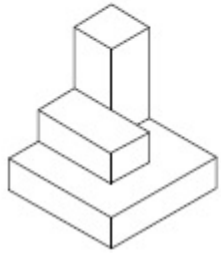


40503627648.

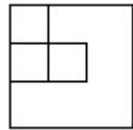
Question Number : 27 Question Id : 4050367569 Question Type : MCQ Option Shuffling : Yes Display Question Number : Yes Is Question Mandatory : No Single Line Question Option : No Option Orientation : Vertical

Correct Marks : 4 Wrong Marks : 1

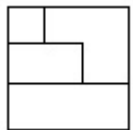
3 - D प्रश्न आकृति में एक वस्तु के एक दृश्य को दिखाया गया है। इसका सही ऊपरी दृश्य, उत्तर आकृतियों में से पहचानिये।



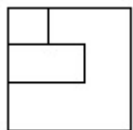
Options :



40503627645.



40503627646.

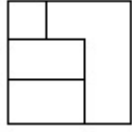


40503627647.



collegedunia.com

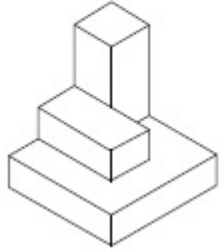
India's largest Student Review Platform



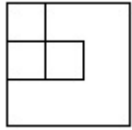
40503627648.

Question Number : 27 Question Id : 4050367569 Question Type : MCQ Option Shuffling : Yes Display Question Number : Yes Is Question Mandatory : No Single Line Question Option : No Option Orientation : Vertical Correct Marks : 4 Wrong Marks : 1

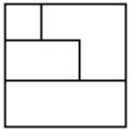
3 - D પ્રશ્ન આકૃતિ એક વસ્તુનું દૃશ્ય બતાવે છે. જવાબ આકૃતિઓમાંથી આનું સાચું ઉપરી દૃશ્ય (top view) શોધો.



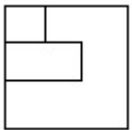
Options :



40503627645.



40503627646.



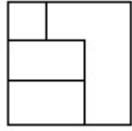
40503627647.



collegedunia.com

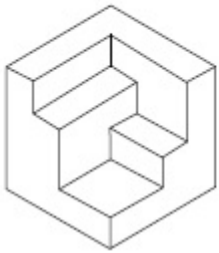
India's largest Student Review Platform

40503627648.



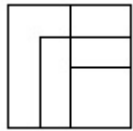
Question Number : 28 Question Id : 4050367570 Question Type : MCQ Option Shuffling : Yes Display Question Number : Yes Is Question Mandatory : No Single Line Question Option : No Option Orientation : Vertical Correct Marks : 4 Wrong Marks : 1

The 3 - D figure shows the view of an object. Identify the correct top view from amongst the answer figures.

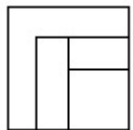


Options :

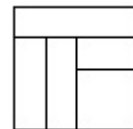
40503627649.

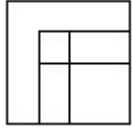


40503627650.



40503627651.



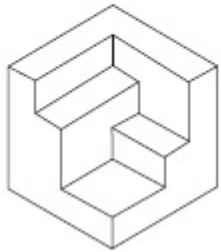


40503627652.

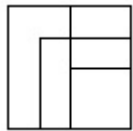
Question Number : 28 Question Id : 4050367570 Question Type : MCQ Option Shuffling : Yes Display Question Number : Yes Is Question Mandatory : No Single Line Question Option : No Option Orientation : Vertical

Correct Marks : 4 Wrong Marks : 1

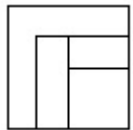
3 - D प्रश्न आकृति में एक वस्तु के एक दृश्य को दिखाया गया है। इसका सही ऊपरी दृश्य, उत्तर आकृतियों में से पहचानिये।



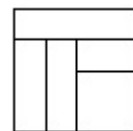
Options :



40503627649.



40503627650.

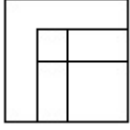


40503627651.



collegedunia.com

India's largest Student Review Platform

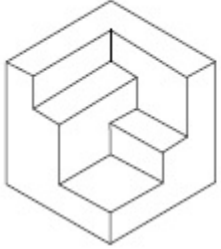


40503627652.

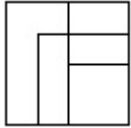
Question Number : 28 Question Id : 4050367570 Question Type : MCQ Option Shuffling : Yes Display Question Number : Yes Is Question Mandatory : No Single Line Question Option : No Option Orientation : Vertical

Correct Marks : 4 Wrong Marks : 1

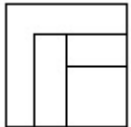
3 - D પ્રશ્ન આકૃતિ એક વસ્તુનું દૃશ્ય બતાવે છે. જવાબ આકૃતિઓમાંથી આનું સાચું ઉપરી દૃશ્ય (top view) શોધો.



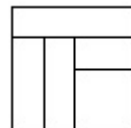
Options :



40503627649.



40503627650.



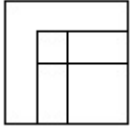
40503627651.



collegedunia.com

India's largest Student Review Platform

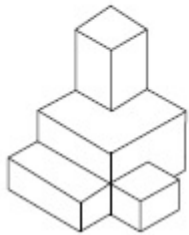
40503627652.



Question Number : 29 Question Id : 4050367571 Question Type : MCQ Option Shuffling : Yes Display Question Number : Yes Is Question Mandatory : No Single Line Question Option : No Option Orientation : Vertical

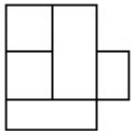
Correct Marks : 4 Wrong Marks : 1

The 3 - D figure shows the view of an object. Identify the correct top view from amongst the answer figures.

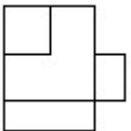


Options :

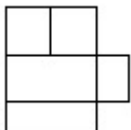
40503627653.



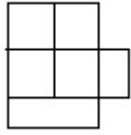
40503627654.



40503627655.



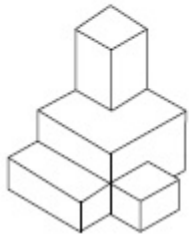
collegedunia.com
India's largest Student Review Platform



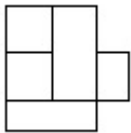
40503627656.

Question Number : 29 Question Id : 4050367571 Question Type : MCQ Option Shuffling : Yes Display Question Number : Yes Is Question Mandatory : No Single Line Question Option : No Option Orientation : Vertical Correct Marks : 4 Wrong Marks : 1

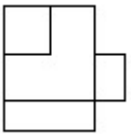
3 - D प्रश्न आकृति में एक वस्तु के एक दृश्य को दिखाया गया है। इसका सही ऊपरी दृश्य, उत्तर आकृतियों में से पहचानिये।



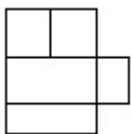
Options :



40503627653.



40503627654.

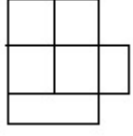


40503627655.



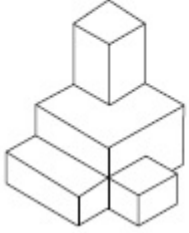
collegedunia.com
India's largest Student Review Platform

40503627656.



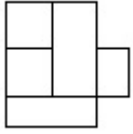
Question Number : 29 Question Id : 4050367571 Question Type : MCQ Option Shuffling : Yes Display Question Number : Yes Is Question Mandatory : No Single Line Question Option : No Option Orientation : Vertical Correct Marks : 4 Wrong Marks : 1

3 - D પ્રશ્ન આકૃતિ એક વસ્તુનું દૃશ્ય બતાવે છે. જવાબ આકૃતિઓમાંથી આનું સાચું ઉપરી દૃશ્ય (top view) શોધો.

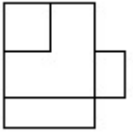


Options :

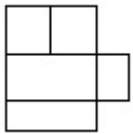
40503627653.



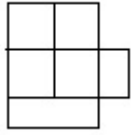
40503627654.



40503627655.



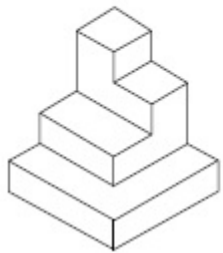
collegedunia.com
India's largest Student Review Platform



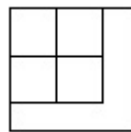
40503627656.

Question Number : 30 Question Id : 4050367572 Question Type : MCQ Option Shuffling : Yes Display Question Number : Yes Is Question Mandatory : No Single Line Question Option : No Option Orientation : Vertical Correct Marks : 4 Wrong Marks : 1

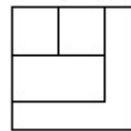
The 3 - D figure shows the view of an object. Identify the correct top view from amongst the answer figures.



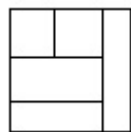
Options :



40503627657.



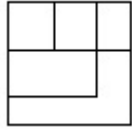
40503627658.



40503627659.



collegedunia.com
India's largest Student Review Platform

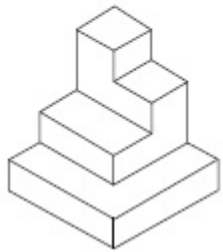


40503627660.

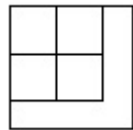
Question Number : 30 Question Id : 4050367572 Question Type : MCQ Option Shuffling : Yes Display Question Number : Yes Is Question Mandatory : No Single Line Question Option : No Option Orientation : Vertical

Correct Marks : 4 Wrong Marks : 1

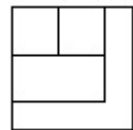
3 - D प्रश्न आकृति में एक वस्तु के एक दृश्य को दिखाया गया है। इसका सही ऊपरी दृश्य, उत्तर आकृतियों में से पहचानिये।



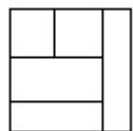
Options :



40503627657.



40503627658.

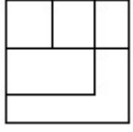


40503627659.



collegedunia.com

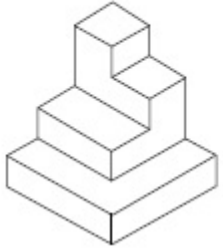
India's largest Student Review Platform



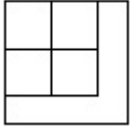
40503627660.

Question Number : 30 Question Id : 4050367572 Question Type : MCQ Option Shuffling : Yes Display Question Number : Yes Is Question Mandatory : No Single Line Question Option : No Option Orientation : Vertical Correct Marks : 4 Wrong Marks : 1

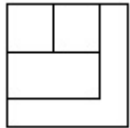
3 - D પ્રશ્ન આકૃતિ એક વસ્તુનું દૃશ્ય બતાવે છે. જવાબ આકૃતિઓમાંથી આનું સાચું ઉપરી દૃશ્ય (top view) શોધો.



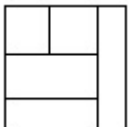
Options :



40503627657.



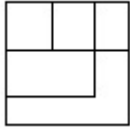
40503627658.



40503627659.



collegedunia.com
India's largest Student Review Platform

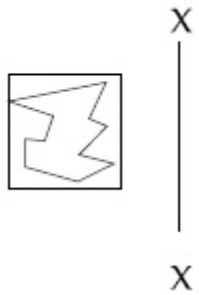


40503627660.

Question Number : 31 Question Id : 4050367573 Question Type : MCQ Option Shuffling : Yes Display Question Number : Yes Is Question Mandatory : No Single Line Question Option : No Option Orientation : Vertical

Correct Marks : 4 Wrong Marks : 1

Which one of the answer figures is the correct mirror image of the problem figure with respect to X - X?



Options :



40503627661.



40503627662.



40503627663.



collegedunia.com

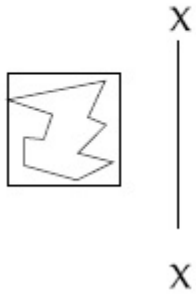
India's largest Student Review Platform

40503627664.



Question Number : 31 Question Id : 4050367573 Question Type : MCQ Option Shuffling : Yes Display Question Number : Yes Is Question Mandatory : No Single Line Question Option : No Option Orientation : Vertical Correct Marks : 4 Wrong Marks : 1

उत्तर आकृतियों में से कौन सी आकृति दी गयी प्रश्न आकृति का X - X से सम्बंधित सही दर्पण प्रतिबिम्ब है?



Options :

40503627661.



40503627662.



40503627663.



collegedunia.com

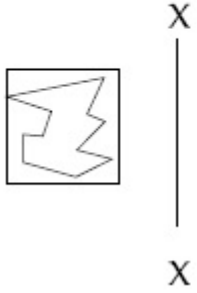
India's largest Student Review Platform

40503627664.



Question Number : 31 Question Id : 4050367573 Question Type : MCQ Option Shuffling : Yes Display Question Number : Yes Is Question Mandatory : No Single Line Question Option : No Option Orientation : Vertical Correct Marks : 4 Wrong Marks : 1

જવાબ આકૃતિઓમાંથી કઈ આકૃતિ, આપેલ પ્રશ્ન આકૃતિનું X-X ની સાપેક્ષ, સાચું દર્પણ પ્રતિબિંબ (mirror image) છે?



Options :

40503627661.



40503627662.



40503627663.



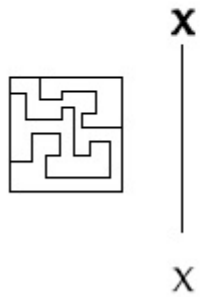
collegedunia.com
India's largest Student Review Platform

40503627664.



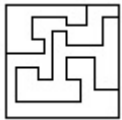
Question Number : 32 Question Id : 4050367574 Question Type : MCQ Option Shuffling : Yes Display Question Number : Yes Is Question Mandatory : No Single Line Question Option : No Option Orientation : Vertical Correct Marks : 4 Wrong Marks : 1

Which one of the answer figures is the correct mirror image of the problem figure with respect to X - X?

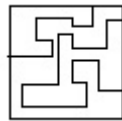


Options :

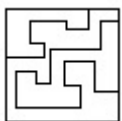
40503627665.



40503627666.

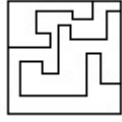


40503627667.



collegedunia.com
India's largest Student Review Platform

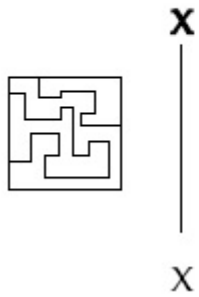
40503627668.



Question Number : 32 Question Id : 4050367574 Question Type : MCQ Option Shuffling : Yes Display Question Number : Yes Is Question Mandatory : No Single Line Question Option : No Option Orientation : Vertical

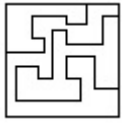
Correct Marks : 4 Wrong Marks : 1

उत्तर आकृतियों में से कौन सी आकृति दी गयी प्रश्न आकृति का X - X से सम्बंधित सही दर्पण प्रतिबिम्ब है?

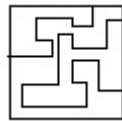


Options :

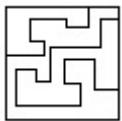
40503627665.



40503627666.



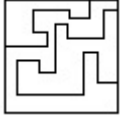
40503627667.



collegedunia.com

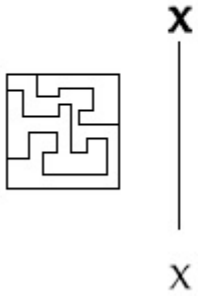
India's largest Student Review Platform

40503627668.



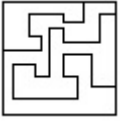
Question Number : 32 Question Id : 4050367574 Question Type : MCQ Option Shuffling : Yes Display Question Number : Yes Is Question Mandatory : No Single Line Question Option : No Option Orientation : Vertical Correct Marks : 4 Wrong Marks : 1

જવાબ આકૃતિઓમાંથી કઈ આકૃતિ, આપેલ પ્રશ્ન આકૃતિનું X - X ની સાપેક્ષ, સાચું દર્પણ પ્રતિબિંબ (mirror image) છે ?

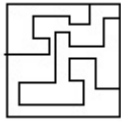


Options :

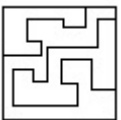
40503627665.



40503627666.

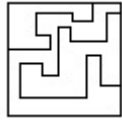


40503627667.



collegedunia.com
India's largest Student Review Platform

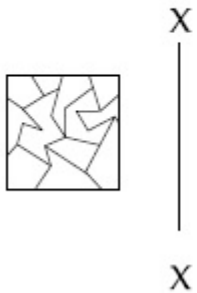
40503627668.



Question Number : 33 Question Id : 4050367575 Question Type : MCQ Option Shuffling : Yes Display Question Number : Yes Is Question Mandatory : No Single Line Question Option : No Option Orientation : Vertical

Correct Marks : 4 Wrong Marks : 1

Which one of the answer figures is the correct mirror image of the problem figure with respect to X - X?



Options :

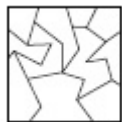
40503627669.



40503627670.



40503627671.



collegedunia.com
India's largest Student Review Platform

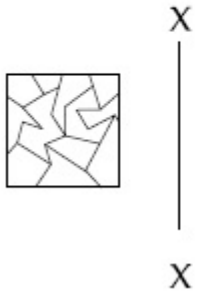
40503627672.



Question Number : 33 Question Id : 4050367575 Question Type : MCQ Option Shuffling : Yes Display Question Number : Yes Is Question Mandatory : No Single Line Question Option : No Option Orientation : Vertical

Correct Marks : 4 Wrong Marks : 1

उत्तर आकृतियों में से कौन सी आकृति दी गयी प्रश्न आकृति का X - X से सम्बंधित सही दर्पण प्रतिबिम्ब है?



Options :

40503627669.



40503627670.



40503627671.



collegedunia.com

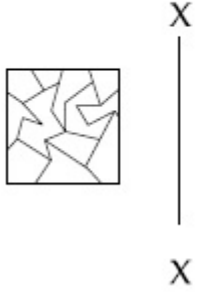
India's largest Student Review Platform

40503627672.



Question Number : 33 Question Id : 4050367575 Question Type : MCQ Option Shuffling : Yes Display Question Number : Yes Is Question Mandatory : No Single Line Question Option : No Option Orientation : Vertical Correct Marks : 4 Wrong Marks : 1

જવાબ આકૃતિઓમાંથી કઈ આકૃતિ, આપેલ પ્રશ્ન આકૃતિનું X-X ની સાપેક્ષ, સાચું દર્પણ પ્રતિબિંબ (mirror image) છે ?

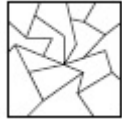


Options :

40503627669.



40503627670.



40503627671.



collegedunia.com
India's largest Student Review Platform

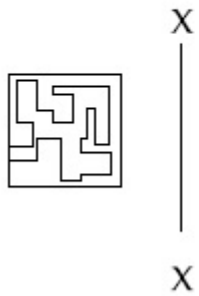
40503627672.



Question Number : 34 Question Id : 4050367576 Question Type : MCQ Option Shuffling : Yes Display Question Number : Yes Is Question Mandatory : No Single Line Question Option : No Option Orientation : Vertical

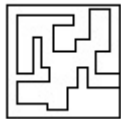
Correct Marks : 4 Wrong Marks : 1

Which one of the answer figures is the correct mirror image of the problem figure with respect to X - X ?

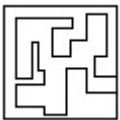


Options :

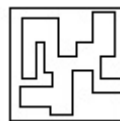
40503627673.



40503627674.

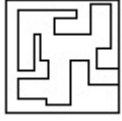


40503627675.



collegedunia.com
India's largest Student Review Platform

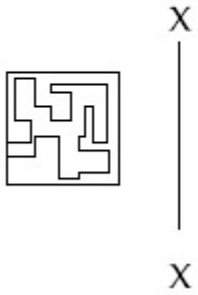
40503627676.



Question Number : 34 Question Id : 4050367576 Question Type : MCQ Option Shuffling : Yes Display Question Number : Yes Is Question Mandatory : No Single Line Question Option : No Option Orientation : Vertical

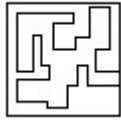
Correct Marks : 4 Wrong Marks : 1

उत्तर आकृतियों में से कौन सी आकृति दी गयी प्रश्न आकृति का X - X से सम्बंधित सही दर्पण प्रतिबिम्ब है?

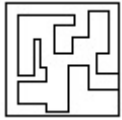


Options :

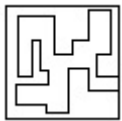
40503627673.



40503627674.



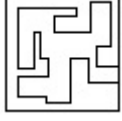
40503627675.



collegedunia.com

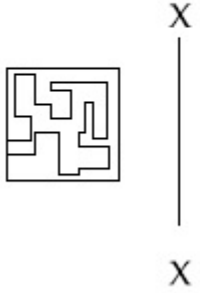
India's largest Student Review Platform

40503627676.



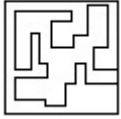
Question Number : 34 Question Id : 4050367576 Question Type : MCQ Option Shuffling : Yes Display Question Number : Yes Is Question Mandatory : No Single Line Question Option : No Option Orientation : Vertical Correct Marks : 4 Wrong Marks : 1

જવાબ આકૃતિઓમાંથી કઈ આકૃતિ, આપેલ પ્રશ્ન આકૃતિનું X - X ની સાપેક્ષ, સાચું દર્પણ પ્રતિબિંબ (mirror image) છે?

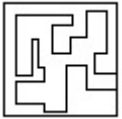


Options :

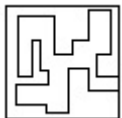
40503627673.



40503627674.



40503627675.



collegedunia.com
India's largest Student Review Platform

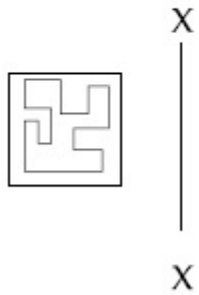
40503627676.



Question Number : 35 Question Id : 4050367577 Question Type : MCQ Option Shuffling : Yes Display Question Number : Yes Is Question Mandatory : No Single Line Question Option : No Option Orientation : Vertical

Correct Marks : 4 Wrong Marks : 1

Which one of the answer figures is the correct mirror image of the problem figure with respect to X - X?




Options :

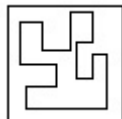
40503627677.



40503627678.




40503627679.



collegedunia.com

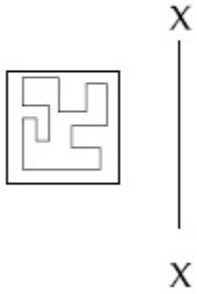
India's largest Student Review Platform



40503627680.

Question Number : 35 Question Id : 4050367577 Question Type : MCQ Option Shuffling : Yes Display Question Number : Yes Is Question Mandatory : No Single Line Question Option : No Option Orientation : Vertical Correct Marks : 4 Wrong Marks : 1


उत्तर आकृतियों में से कौन सी आकृति दी गयी प्रश्न आकृति का X - X से सम्बंधित सही दर्पण प्रतिबिम्ब है?



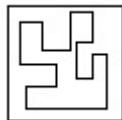
Options :



40503627677.



40503627678.




40503627679.



collegedunia.com

India's largest Student Review Platform

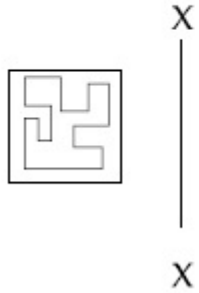


40503627680.

Question Number : 35 Question Id : 4050367577 Question Type : MCQ Option Shuffling : Yes Display Question Number : Yes Is Question Mandatory : No Single Line Question Option : No Option Orientation : Vertical

Correct Marks : 4 Wrong Marks : 1

જવાબ આકૃતિઓમાંથી કઈ આકૃતિ, આપેલ પ્રશ્ન આકૃતિનું X - X ની સાપેક્ષ, સાચું દર્પણ પ્રતિબિંબ (mirror image) છે?



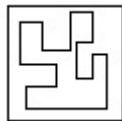
Options :



40503627677.



40503627678.




40503627679.



collegedunia.com

India's largest Student Review Platform

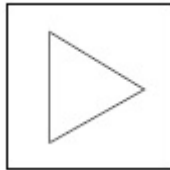


40503627680.

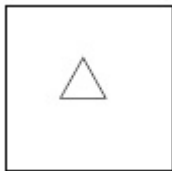
Question Number : 36 Question Id : 4050367578 Question Type : MCQ Option Shuffling : Yes Display Question Number : Yes Is Question Mandatory : No Single Line Question Option : No Option Orientation : Vertical Correct Marks : 4 Wrong Marks : 1

Find the odd figure out of the problem figures given below.

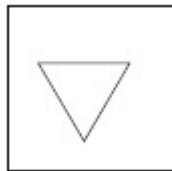
Options :



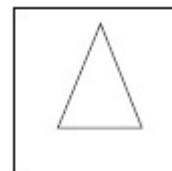
40503627681.



40503627682.



40503627683.



40503627684.



collegedunia.com

India's largest Student Review Platform

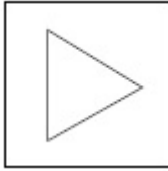
Question Number : 36 Question Id : 4050367578 Question Type : MCQ Option Shuffling : Yes Display Question Number : Yes Is Question Mandatory : No Single Line Question Option : No Option Orientation : Vertical

Correct Marks : 4 Wrong Marks : 1

नीचे दी गयी प्रश्न आकृतियों में से विषम आकृति पहचानिये।

Options :

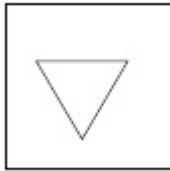
40503627681.



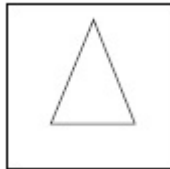
40503627682.



40503627683.



40503627684.



Question Number : 36 Question Id : 4050367578 Question Type : MCQ Option Shuffling : Yes Display Question Number : Yes Is Question Mandatory : No Single Line Question Option : No Option Orientation : Vertical

Correct Marks : 4 Wrong Marks : 1



collegedunia.com

India's largest Student Review Platform

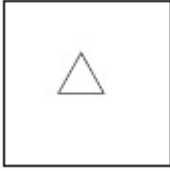
નીચે આપેલ પ્રશ્ન આકૃતિઓમાંથી વિષમ આકૃતિ (odd figure) શોધો.

Options :

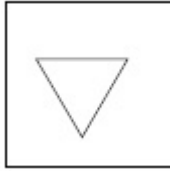
40503627681.



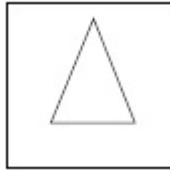
40503627682.



40503627683.



40503627684.



Question Number : 37 Question Id : 4050367579 Question Type : MCQ Option Shuffling : Yes Display Question Number : Yes Is Question Mandatory : No Single Line Question Option : No Option Orientation : Vertical

Correct Marks : 4 Wrong Marks : 1

Find the odd figure out of the problem figures given below.

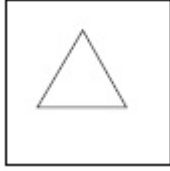
Options :



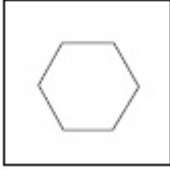
collegedunia.com

India's largest Student Review Platform

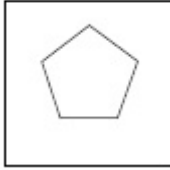
40503627685.



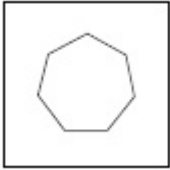
40503627686.



40503627687.



40503627688.



Question Number : 37 Question Id : 4050367579 Question Type : MCQ Option Shuffling : Yes Display Question Number : Yes Is Question Mandatory : No Single Line Question Option : No Option Orientation : Vertical Correct Marks : 4 Wrong Marks : 1

नीचे दी गयी प्रश्न आकृतियों में से विषम आकृति पहचानिये।

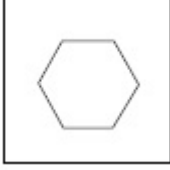
Options :

40503627685.

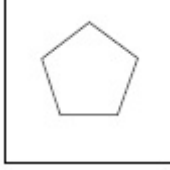


collegedunia.com
India's largest Student Review Platform

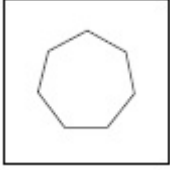
40503627686.



40503627687.



40503627688.

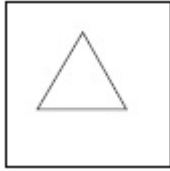


Question Number : 37 Question Id : 4050367579 Question Type : MCQ Option Shuffling : Yes Display Question Number : Yes Is Question Mandatory : No Single Line Question Option : No Option Orientation : Vertical Correct Marks : 4 Wrong Marks : 1

નીચે આપેલ પ્રશ્ન આકૃતિઓમાંથી વિષમ આકૃતિ (odd figure) શોધો.

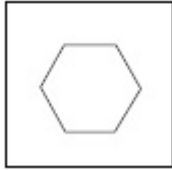
Options :

40503627685.

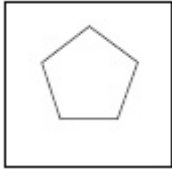


collegedunia.com
India's largest Student Review Platform

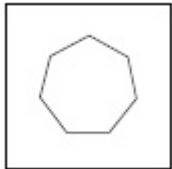
40503627686.



40503627687.



40503627688.



Question Number : 38 Question Id : 4050367580 Question Type : MCQ Option Shuffling : Yes Display Question Number : Yes Is Question Mandatory : No Single Line Question Option : No Option Orientation : Vertical

Correct Marks : 4 Wrong Marks : 1

Find the odd figure out of the problem figures given below.

Options :


40503627689.



collegedunia.com

India's largest Student Review Platform

40503627690.



40503627691.



40503627692.



Question Number : 38 Question Id : 4050367580 Question Type : MCQ Option Shuffling : Yes Display Question Number : Yes Is Question Mandatory : No Single Line Question Option : No Option Orientation : Vertical Correct Marks : 4 Wrong Marks : 1

नीचे दी गयी प्रश्न आकृतियों में से विषम आकृति पहचानिये।

Options :


40503627689.



collegedunia.com

India's largest Student Review Platform

40503627690.



40503627691.



40503627692.



Question Number : 38 Question Id : 4050367580 Question Type : MCQ Option Shuffling : Yes Display Question Number : Yes Is Question Mandatory : No Single Line Question Option : No Option Orientation : Vertical Correct Marks : 4 Wrong Marks : 1

નીચે આપેલ પ્રશ્ન આકૃતિઓમાંથી વિષમ આકૃતિ (odd figure) શોધો.

Options :


40503627689.




collegedunia.com

India's largest Student Review Platform

40503627690.



40503627691.



40503627692.

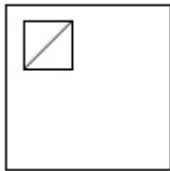


Question Number : 39 Question Id : 4050367581 Question Type : MCQ Option Shuffling : Yes Display Question Number : Yes Is Question Mandatory : No Single Line Question Option : No Option Orientation : Vertical Correct Marks : 4 Wrong Marks : 1

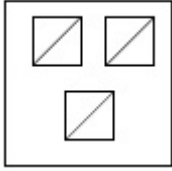
Find the odd figure out of the problem figures given below.

Options :

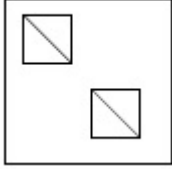
40503627693.



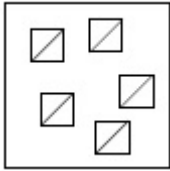
40503627694.



40503627695.



40503627696.

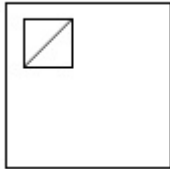


Question Number : 39 Question Id : 4050367581 Question Type : MCQ Option Shuffling : Yes Display Question Number : Yes Is Question Mandatory : No Single Line Question Option : No Option Orientation : Vertical Correct Marks : 4 Wrong Marks : 1

नीचे दी गयी प्रश्न आकृतियों में से विषम आकृति पहचानिये।

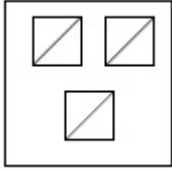
Options :

40503627693.

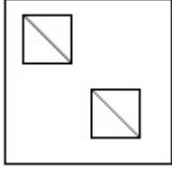


collegedunia.com
India's largest Student Review Platform

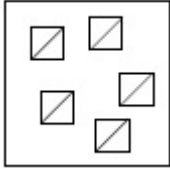
40503627694.



40503627695.



40503627696.

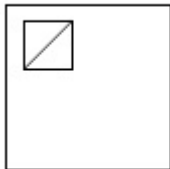


Question Number : 39 Question Id : 4050367581 Question Type : MCQ Option Shuffling : Yes Display Question Number : Yes Is Question Mandatory : No Single Line Question Option : No Option Orientation : Vertical Correct Marks : 4 Wrong Marks : 1

नीचे आपेस प्रश्न आकृतिओमांथी विषम आकृति (odd figure) शोधो.

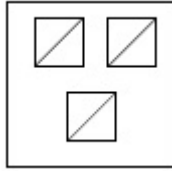
Options :

40503627693.

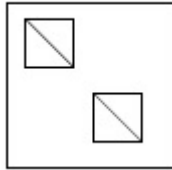


collegedunia.com
India's largest Student Review Platform

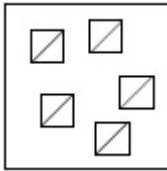
40503627694.



40503627695.



40503627696.

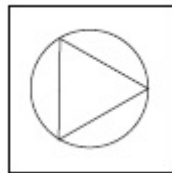


Question Number : 40 Question Id : 4050367582 Question Type : MCQ Option Shuffling : Yes Display Question Number : Yes Is Question Mandatory : No Single Line Question Option : No Option Orientation : Vertical Correct Marks : 4 Wrong Marks : 1

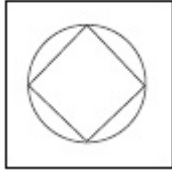
Find the odd figure out of the problem figures given below.

Options :

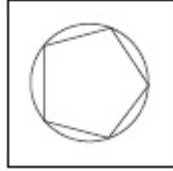
40503627697.



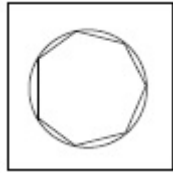
40503627698.



40503627699.



40503627700.

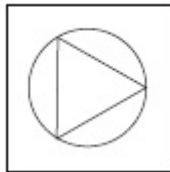


Question Number : 40 Question Id : 4050367582 Question Type : MCQ Option Shuffling : Yes Display Question Number : Yes Is Question Mandatory : No Single Line Question Option : No Option Orientation : Vertical Correct Marks : 4 Wrong Marks : 1

नीचे दी गयी प्रश्न आकृतियों में से विषम आकृति पहचानिये।

Options :

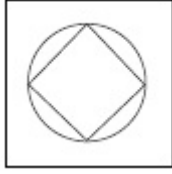
40503627697.



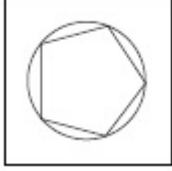
collegedunia.com

India's largest Student Review Platform

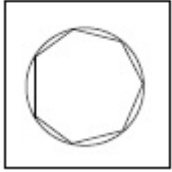
40503627698.



40503627699.



40503627700.

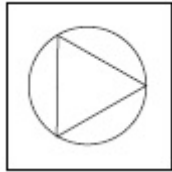


Question Number : 40 Question Id : 4050367582 Question Type : MCQ Option Shuffling : Yes Display Question Number : Yes Is Question Mandatory : No Single Line Question Option : No Option Orientation : Vertical Correct Marks : 4 Wrong Marks : 1

नीचे आपेस प्रश्न आकृतिओमांथी विषम आकृति (odd figure) शोधो.

Options :

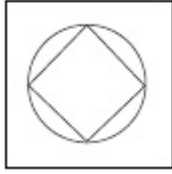
40503627697.



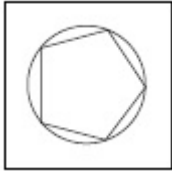
collegedunia.com

India's largest Student Review Platform

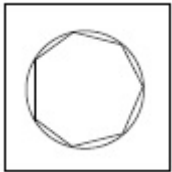
40503627698.



40503627699.

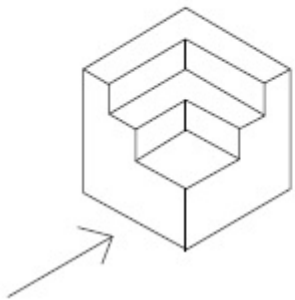


40503627700.



Question Number : 41 Question Id : 4050367583 Question Type : MCQ Option Shuffling : Yes Display Question Number : Yes Is Question Mandatory : No Single Line Question Option : No Option Orientation : Vertical Correct Marks : 4 Wrong Marks : 1

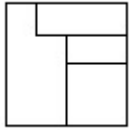
The 3 - D figure shows the view of an object. Identify the correct front view in the direction of the arrow, from amongst the answer figures.



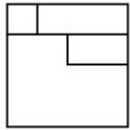
Options :



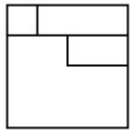
collegedunia.com
India's largest Student Review Platform



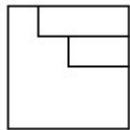
40503627701.



40503627702.



40503627703.



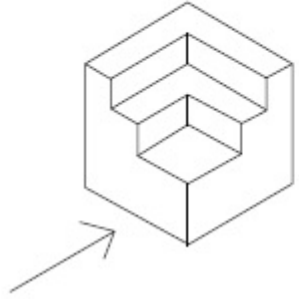
40503627704.

Question Number : 41 Question Id : 4050367583 Question Type : MCQ Option Shuffling : Yes Display Question Number : Yes Is Question Mandatory : No Single Line Question Option : No Option Orientation : Vertical Correct Marks : 4 Wrong Marks : 1

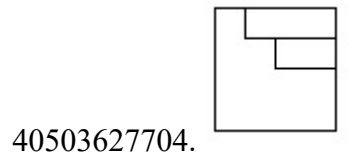
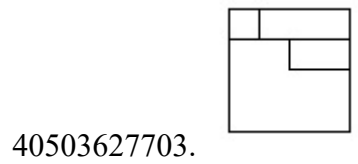
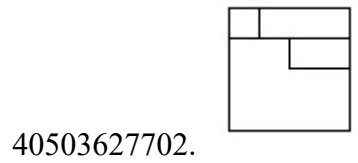
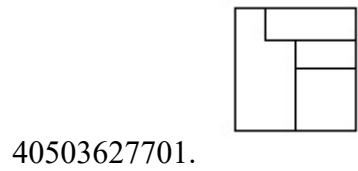


collegedunia.com
India's largest Student Review Platform

3 - D प्रश्न आकृति में एक वस्तु के एक दृश्य को दिखाया गया है। तीर की दिशा में देखते हुए, इसके सम्मुख दृश्य को उत्तर आकृतियों में से पहचानिये।



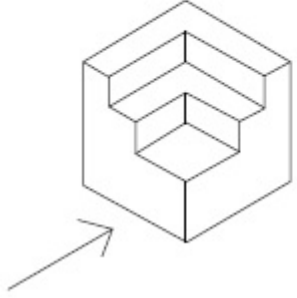
Options :



Question Number : 41 Question Id : 4050367583 Question Type : MCQ Option Shuffling : Yes Display Question Number : Yes Is Question Mandatory : No Single Line Question Option : No Option Orientation : Vertical

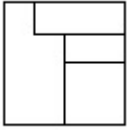
Correct Marks : 4 Wrong Marks : 1

3 - D પ્રશ્ન આકૃતિ એક વસ્તુનું દૃશ્ય બતાવે છે. ત્રીસની દિશામાં જોતા, આનું સાચું સન્મુખ દૃશ્ય (front view) જવાબ આકૃતિઓમાંથી શોધો.

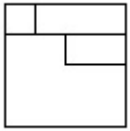


Options :

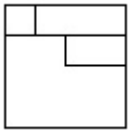
40503627701.



40503627702.

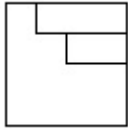


40503627703.



collegedunia.com

India's largest Student Review Platform

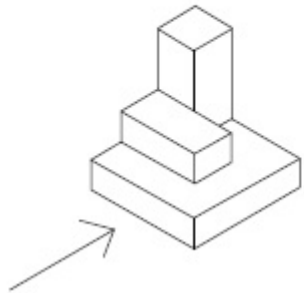


40503627704.

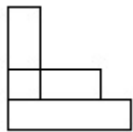
Question Number : 42 Question Id : 4050367584 Question Type : MCQ Option Shuffling : Yes Display Question Number : Yes Is Question Mandatory : No Single Line Question Option : No Option Orientation : Vertical

Correct Marks : 4 Wrong Marks : 1

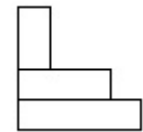
The 3 - D figure shows the view of an object. Identify the correct front view in the direction of the arrow, from amongst the answer figures.



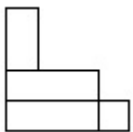
Options :



40503627705.



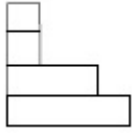
40503627706.



40503627707.



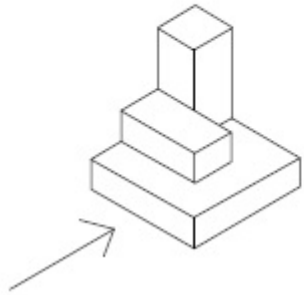
collegedunia.com
India's largest Student Review Platform



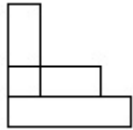
40503627708.

Question Number : 42 Question Id : 4050367584 Question Type : MCQ Option Shuffling : Yes Display Question Number : Yes Is Question Mandatory : No Single Line Question Option : No Option Orientation : Vertical Correct Marks : 4 Wrong Marks : 1

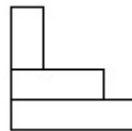
3 - D प्रश्न आकृति में एक वस्तु के एक दृश्य को दिखाया गया है। तीर की दिशा में देखते हुए, इसके सम्मुख दृश्य को उत्तर आकृतियों में से पहचानिये।



Options :



40503627705.



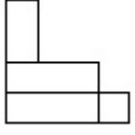
40503627706.



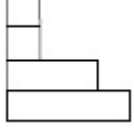
collegedunia.com

India's largest Student Review Platform

40503627707.

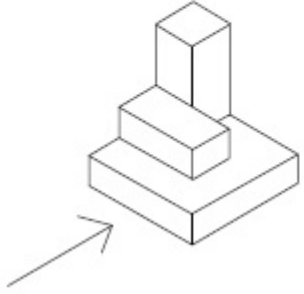


40503627708.



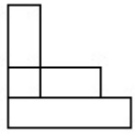
Question Number : 42 Question Id : 4050367584 Question Type : MCQ Option Shuffling : Yes Display Question Number : Yes Is Question Mandatory : No Single Line Question Option : No Option Orientation : Vertical Correct Marks : 4 Wrong Marks : 1

3 - D પ્રશ્ન આકૃતિ એક વસ્તુનું દર્શ્ય બતાવે છે. ત્રીરની દિશામાં જોતા, આનું સાચું સન્મુખ દર્શ્ય (front view) જવાબ આકૃતિઓમાંથી શોધો.

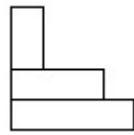


Options :

40503627705.

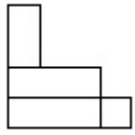


40503627706.

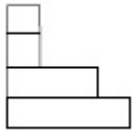


collegedunia.com
India's largest Student Review Platform

40503627707.

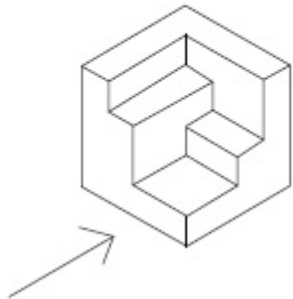


40503627708.

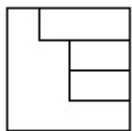


Question Number : 43 Question Id : 4050367585 Question Type : MCQ Option Shuffling : Yes Display Question Number : Yes Is Question Mandatory : No Single Line Question Option : No Option Orientation : Vertical Correct Marks : 4 Wrong Marks : 1

The 3 - D figure shows the view of an object. Identify the correct front view in the direction of the arrow, from amongst the answer figures.



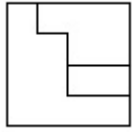
Options :



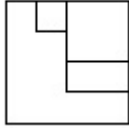
40503627709.



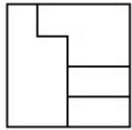
collegedunia.com
India's largest Student Review Platform



40503627710.



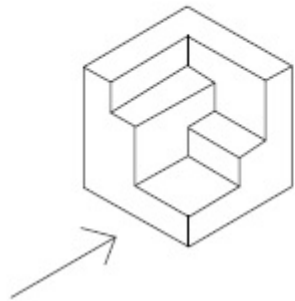
40503627711.



40503627712.

Question Number : 43 Question Id : 4050367585 Question Type : MCQ Option Shuffling : Yes Display Question Number : Yes Is Question Mandatory : No Single Line Question Option : No Option Orientation : Vertical Correct Marks : 4 Wrong Marks : 1

3 - D प्रश्न आकृति में एक वस्तु के एक दृश्य को दिखाया गया है। तीर की दिशा में देखते हुए, इसके सम्मुख दृश्य को उत्तर आकृतियों में से पहचानिये।

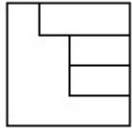


Options :

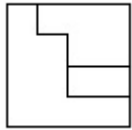


collegedunia.com

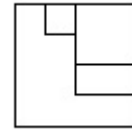
India's largest Student Review Platform



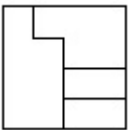
40503627709.



40503627710.



40503627711.



40503627712.

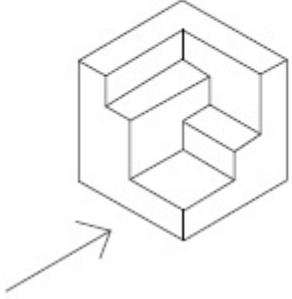
Question Number : 43 Question Id : 4050367585 Question Type : MCQ Option Shuffling : Yes Display Question Number : Yes Is Question Mandatory : No Single Line Question Option : No Option Orientation : Vertical Correct Marks : 4 Wrong Marks : 1



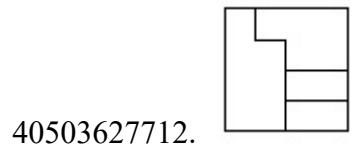
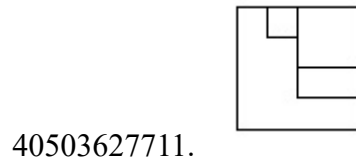
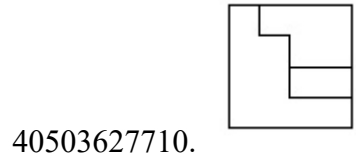
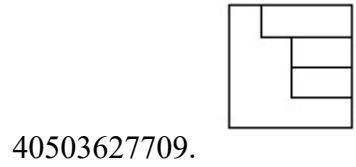
collegedunia.com

India's largest Student Review Platform

3 - D પ્રશ્ન આકૃતિ એક વસ્તુનું દશ્ય બતાવે છે. ત્રીસની દિશામાં જોતા, આનું સાચું સન્મુખ દશ્ય (front view) જવાબ આકૃતિઓમાંથી શોધો.



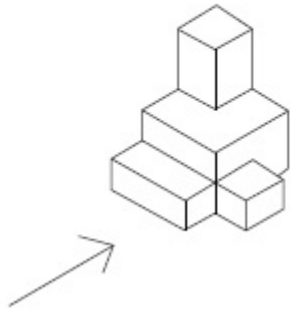
Options :



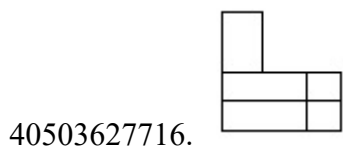
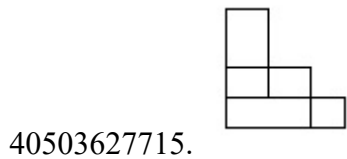
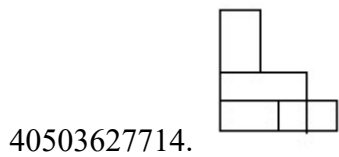
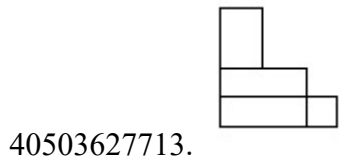
Question Number : 44 Question Id : 4050367586 Question Type : MCQ Option Shuffling : Yes Display Question Number : Yes Is Question Mandatory : No Single Line Question Option : No Option Orientation : Vertical

Correct Marks : 4 Wrong Marks : 1

The 3 - D figure shows the view of an object. Identify the correct front view in the direction of the arrow, from amongst the answer figures.



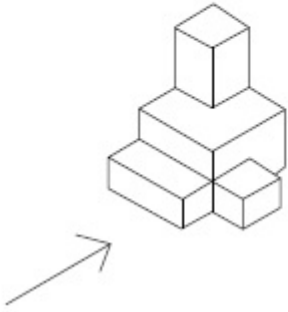
Options :



collegedunia.com
India's largest Student Review Platform

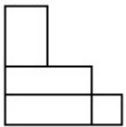
Question Number : 44 Question Id : 4050367586 Question Type : MCQ Option Shuffling : Yes Display Question Number : Yes Is Question Mandatory : No Single Line Question Option : No Option Orientation : Vertical Correct Marks : 4 Wrong Marks : 1

3 - D प्रश्न आकृति में एक वस्तु के एक दृश्य को दिखाया गया है। तीर की दिशा में देखते हुए, इसके सम्मुख दृश्य को उत्तर आकृतियों में से पहचानिये।

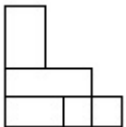


Options :

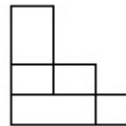
40503627713.



40503627714.

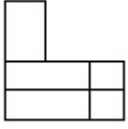


40503627715.



collegedunia.com
India's largest Student Review Platform

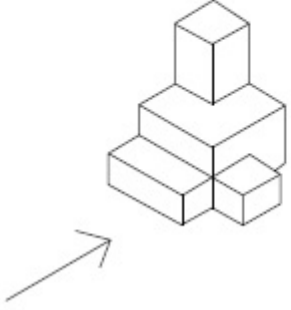
40503627716.



Question Number : 44 Question Id : 4050367586 Question Type : MCQ Option Shuffling : Yes Display Question Number : Yes Is Question Mandatory : No Single Line Question Option : No Option Orientation : Vertical

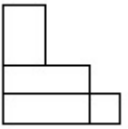
Correct Marks : 4 Wrong Marks : 1

3 - D પ્રશ્ન આકૃતિ એક વસ્તુનું દૃશ્ય બતાવે છે. ત્રીસની દિશામાં જોતા, આનું સાચું સન્મુખ દૃશ્ય (front view) જવાબ આકૃતિઓમાંથી શોધો.

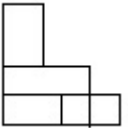


Options :

40503627713.

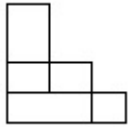


40503627714.

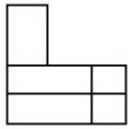


collegedunia.com
India's largest Student Review Platform

40503627715.

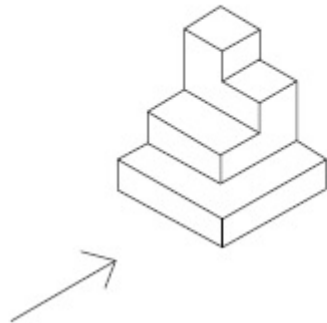


40503627716.



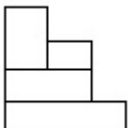
Question Number : 45 Question Id : 4050367587 Question Type : MCQ Option Shuffling : Yes Display Question Number : Yes Is Question Mandatory : No Single Line Question Option : No Option Orientation : Vertical Correct Marks : 4 Wrong Marks : 1

The 3 - D figure shows the view of an object. Identify the correct front view in the direction of the arrow, from amongst the answer figures.



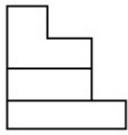
Options :

40503627717.

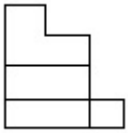


collegedunia.com
India's largest Student Review Platform

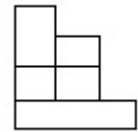
40503627718.



40503627719.



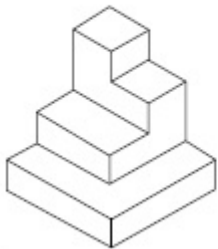
40503627720.



Question Number : 45 Question Id : 4050367587 Question Type : MCQ Option Shuffling : Yes Display Question Number : Yes Is Question Mandatory : No Single Line Question Option : No Option Orientation : Vertical

Correct Marks : 4 Wrong Marks : 1

3 - D प्रश्न आकृति में एक वस्तु के एक दृश्य को दिखाया गया है। तीर की दिशा में देखते हुए, इसके सम्मुख दृश्य को उत्तर आकृतियों में से पहचानिये।

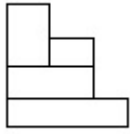


Options :

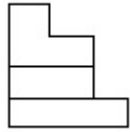


collegedunia.com

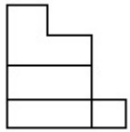
India's largest Student Review Platform



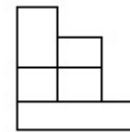
40503627717.



40503627718.



40503627719.



40503627720.

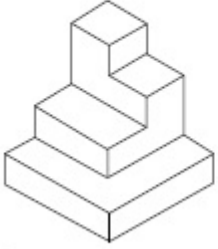
Question Number : 45 Question Id : 4050367587 Question Type : MCQ Option Shuffling : Yes Display Question Number : Yes Is Question Mandatory : No Single Line Question Option : No Option Orientation : Vertical Correct Marks : 4 Wrong Marks : 1



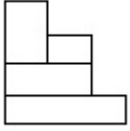
collegedunia.com

India's largest Student Review Platform

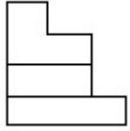
3 - D પ્રશ્ન આકૃતિ એક વસ્તુનું દૃશ્ય બતાવે છે. ત્રીસની દિશામાં જોતા, આનું સાચું સન્મુખ દૃશ્ય (front view) જવાબ આકૃતિઓમાંથી શોધો.



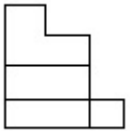
Options :



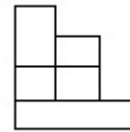
40503627717.



40503627718.



40503627719.



40503627720.



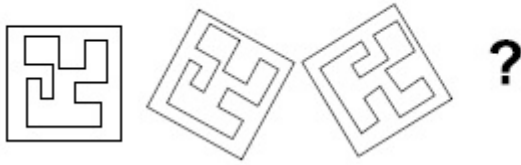
collegedunia.com

India's largest Student Review Platform

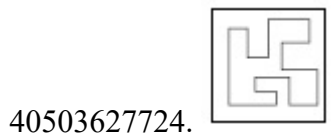
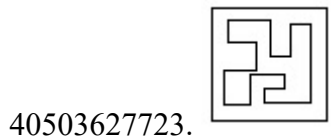
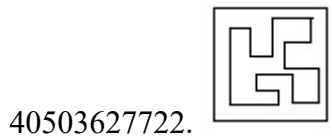
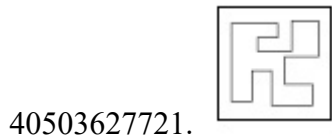
Question Number : 46 Question Id : 4050367588 Question Type : MCQ Option Shuffling : Yes Display Question Number : Yes Is Question Mandatory : No Single Line Question Option : No Option Orientation : Vertical

Correct Marks : 4 Wrong Marks : 1


Which one of the answer figure will complete the sequence of the three problem figures ?



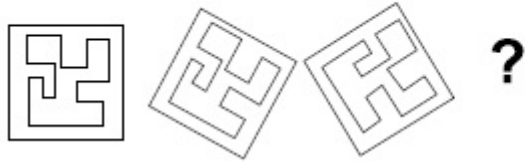
Options :



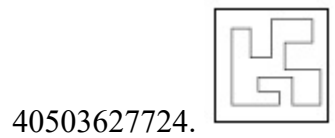
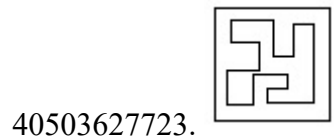
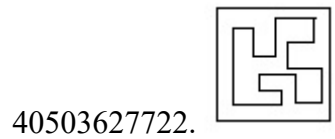
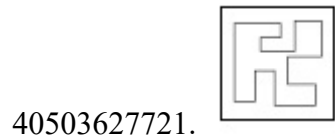
Question Number : 46 Question Id : 4050367588 Question Type : MCQ Option Shuffling : Yes Display Question Number : Yes Is Question Mandatory : No Single Line Question Option : No Option Orientation : Vertical Correct Marks : 4 Wrong Marks : 1



उत्तर आकृतियों में से कौन सी आकृति को तीन प्रश्न आकृतियों में लगाने से अनुक्रम (sequence) पूरा हो जायेगा ?



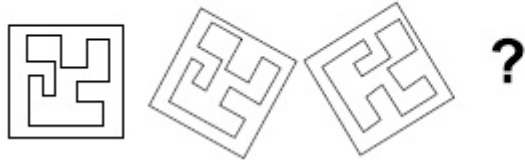
Options :



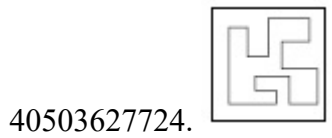
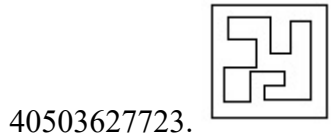
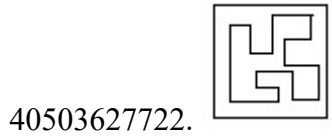
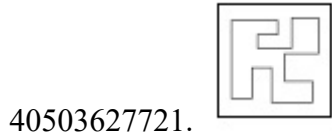
Question Number : 46 Question Id : 4050367588 Question Type : MCQ Option Shuffling : Yes Display Question Number : Yes Is Question Mandatory : No Single Line Question Option : No Option Orientation : Vertical Correct Marks : 4 Wrong Marks : 1



જવાબ આકૃતિઓમાંથી કઈ આકૃતિ આપેલ ત્રણ પ્રશ્ન આકૃતિઓની શ્રેણી પૂર્ણ કરશે?

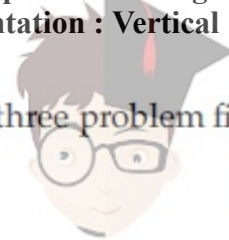
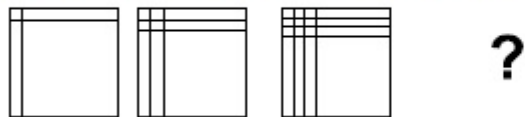


Options :

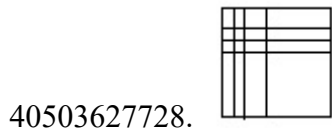
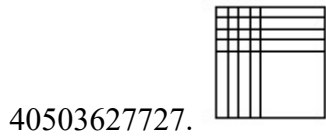
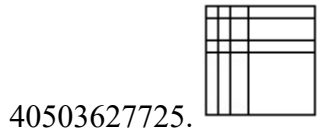


Question Number : 47 Question Id : 4050367589 Question Type : MCQ Option Shuffling : Yes Display Question Number : Yes Is Question Mandatory : No Single Line Question Option : No Option Orientation : Vertical Correct Marks : 4 Wrong Marks : 1

Which one of the answer figure will complete the sequence of the three problem figures ?

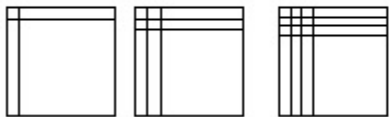


Options :



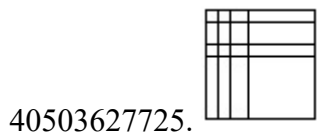
Question Number : 47 Question Id : 4050367589 Question Type : MCQ Option Shuffling : Yes Display Question Number : Yes Is Question Mandatory : No Single Line Question Option : No Option Orientation : Vertical Correct Marks : 4 Wrong Marks : 1

उत्तर आकृतियों में से कौन सी आकृति को तीन प्रश्न आकृतियों में लगाने से अनुक्रम (sequence) पूरा हो जायेगा ?



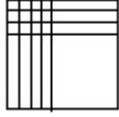
?

Options :

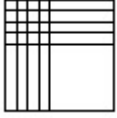


collegedunia.com
India's largest Student Review Platform

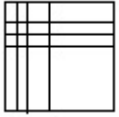
40503627726.



40503627727.

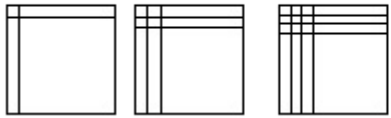


40503627728.



Question Number : 47 Question Id : 4050367589 Question Type : MCQ Option Shuffling : Yes Display Question Number : Yes Is Question Mandatory : No Single Line Question Option : No Option Orientation : Vertical Correct Marks : 4 Wrong Marks : 1

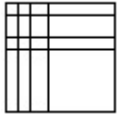
જવાબ આકૃતિઓમાંથી કઈ આકૃતિ આપેલ ત્રણ પ્રશ્ન આકૃતિઓની શ્રેણી પૂર્ણ કરશે?



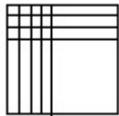
?

Options :

40503627725.



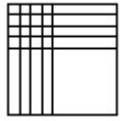
40503627726.



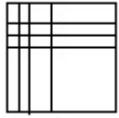
collegedunia.com

India's largest Student Review Platform

40503627727.

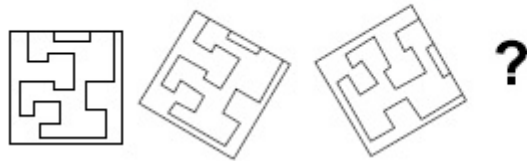


40503627728.



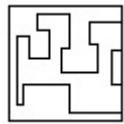
Question Number : 48 Question Id : 4050367590 Question Type : MCQ Option Shuffling : Yes Display Question Number : Yes Is Question Mandatory : No Single Line Question Option : No Option Orientation : Vertical Correct Marks : 4 Wrong Marks : 1

Which one of the answer figure will complete the sequence of the three problem figures ?

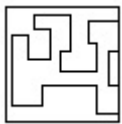


Options :

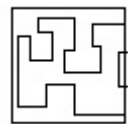
40503627729.



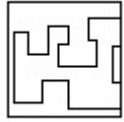
40503627730.



40503627731.



collegedunia.com
India's largest Student Review Platform

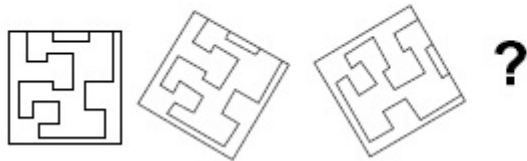


40503627732.

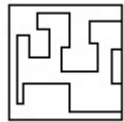
Question Number : 48 Question Id : 4050367590 Question Type : MCQ Option Shuffling : Yes Display Question Number : Yes Is Question Mandatory : No Single Line Question Option : No Option Orientation : Vertical

Correct Marks : 4 Wrong Marks : 1

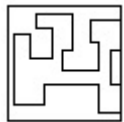
उत्तर आकृतियों में से कौन सी आकृति को तीन प्रश्न आकृतियों में लगाने से अनुक्रम (sequence) पूरा हो जायेगा ?



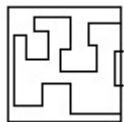
Options :



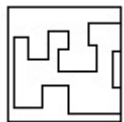
40503627729.



40503627730.



40503627731.



40503627732.



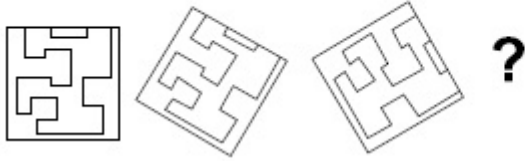
collegedunia.com

India's largest Student Review Platform

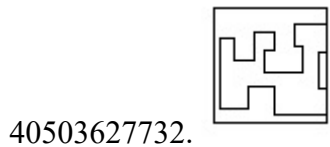
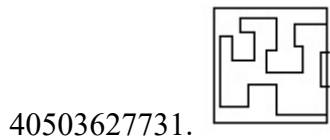
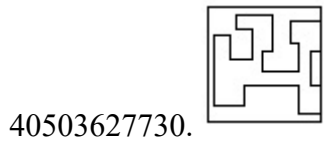
Question Number : 48 Question Id : 4050367590 Question Type : MCQ Option Shuffling : Yes Display Question Number : Yes Is Question Mandatory : No Single Line Question Option : No Option Orientation : Vertical

Correct Marks : 4 Wrong Marks : 1

જવાબ આકૃતિઓમાંથી કઈ આકૃતિ આપેલ ત્રણ પ્રશ્ન આકૃતિઓની શ્રેણી પૂર્ણ કરશે?



Options :



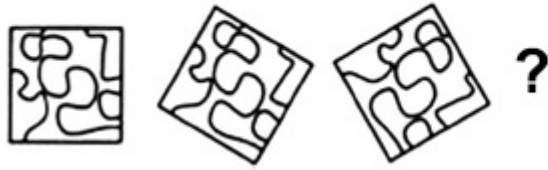
Question Number : 49 Question Id : 4050367591 Question Type : MCQ Option Shuffling : Yes Display Question Number : Yes Is Question Mandatory : No Single Line Question Option : No Option Orientation : Vertical

Correct Marks : 4 Wrong Marks : 1




collegedunia.com
India's largest Student Review Platform

Which one of the answer figure will complete the sequence of the three problem figures ?



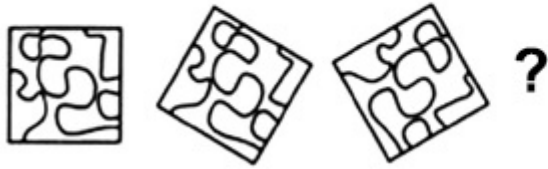
Options :




Question Number : 49 Question Id : 4050367591 Question Type : MCQ Option Shuffling : Yes Display Question Number : Yes Is
Question Mandatory : No Single Line Question Option : No Option Orientation : Vertical
Correct Marks : 4 Wrong Marks : 1



उत्तर आकृतियों में से कौन सी आकृति को तीन प्रश्न आकृतियों में लगाने से अनुक्रम (sequence) पूरा हो जायेगा ?



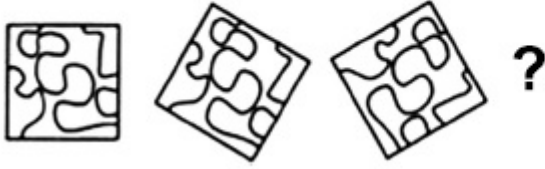
Options :



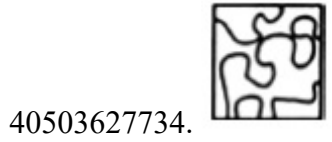

Question Number : 49 Question Id : 4050367591 Question Type : MCQ Option Shuffling : Yes Display Question Number : Yes Is Question Mandatory : No Single Line Question Option : No Option Orientation : Vertical Correct Marks : 4 Wrong Marks : 1



જવાબ આકૃતિઓમાંથી કઈ આકૃતિ આપેલ ત્રણ પ્રશ્ન આકૃતિઓની શ્રેણી પૂર્ણ કરશે?



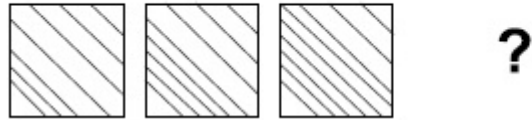
Options :



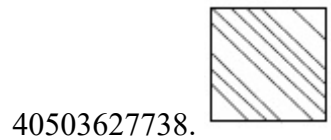
Question Number : 50 Question Id : 4050367592 Question Type : MCQ Option Shuffling : Yes Display Question Number : Yes Is
Question Mandatory : No Single Line Question Option : No Option Orientation : Vertical
Correct Marks : 4 Wrong Marks : 1



Which one of the answer figure will complete the sequence of the three problem figures ?



Options :



Question Number : 50 Question Id : 4050367592 Question Type : MCQ Option Shuffling : Yes Display Question Number : Yes Is

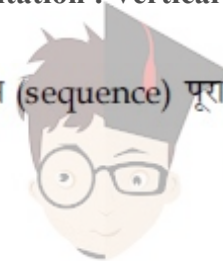
Question Mandatory : No Single Line Question Option : No Option Orientation : Vertical

Correct Marks : 4 Wrong Marks : 1

उत्तर आकृतियों में से कौन सी आकृति को तीन प्रश्न आकृतियों में लगाने से अनुक्रम (sequence) पूरा हो जायेगा ?



Options :

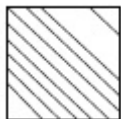


collegedunia.com

India's largest Student Review Platform

40503627737. 

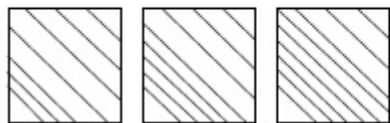
40503627738. 

40503627739. 

40503627740. 

Question Number : 50 Question Id : 4050367592 Question Type : MCQ Option Shuffling : Yes Display Question Number : Yes Is Question Mandatory : No Single Line Question Option : No Option Orientation : Vertical Correct Marks : 4 Wrong Marks : 1

જવાબ આકૃતિઓમાંથી કઈ આકૃતિ આપેલ ત્રણ પ્રશ્ન આકૃતિઓની શ્રેણી પૂર્ણ કરશે?



?

Options :

40503627737. 

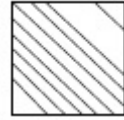


collegedunia.com
India's largest Student Review Platform

40503627738.



40503627739.

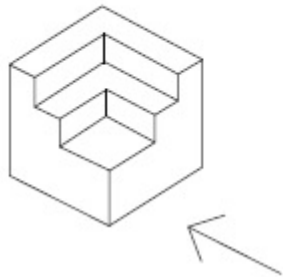


40503627740.



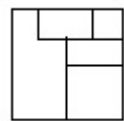
Question Number : 51 Question Id : 4050367593 Question Type : MCQ Option Shuffling : Yes Display Question Number : Yes Is Question Mandatory : No Single Line Question Option : No Option Orientation : Vertical Correct Marks : 4 Wrong Marks : 1

The 3 - D figure shows the view of an object. Identify the correct view in the direction of the arrow, from amongst the answer figures.



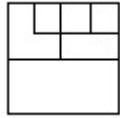
Options :

40503627741.

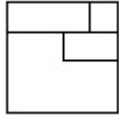


collegedunia.com
India's largest Student Review Platform

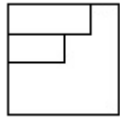
40503627742.



40503627743.



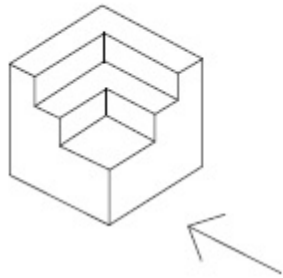
40503627744.



Question Number : 51 Question Id : 4050367593 Question Type : MCQ Option Shuffling : Yes Display Question Number : Yes Is Question Mandatory : No Single Line Question Option : No Option Orientation : Vertical

Correct Marks : 4 Wrong Marks : 1

3 - D प्रश्न आकृति में एक वस्तु के एक दृश्य को दिखाया गया है। तीर की दिशा में देखते हुए, इसके सम्मुख दृश्य को उत्तर आकृतियों में से पहचानिये।

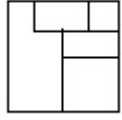


Options :

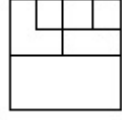


collegedunia.com

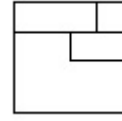
India's largest Student Review Platform



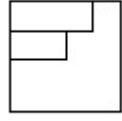
40503627741.



40503627742.



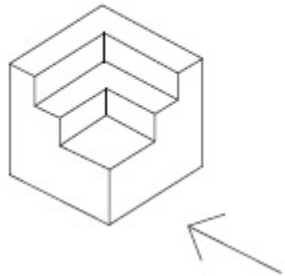
40503627743.



40503627744.

Question Number : 51 Question Id : 4050367593 Question Type : MCQ Option Shuffling : Yes Display Question Number : Yes Is Question Mandatory : No Single Line Question Option : No Option Orientation : Vertical Correct Marks : 4 Wrong Marks : 1

3 - D પ્રશ્ન આકૃતિ એક વસ્તુનું દૃશ્ય બતાવે છે. તીરની દિશામાં જોતાં, આનું સાચું દૃશ્ય જવાબ આકૃતિઓમાંથી શોધો.

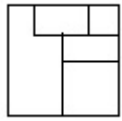


Options :

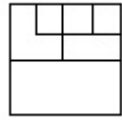


collegedunia.com

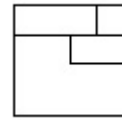
India's largest Student Review Platform



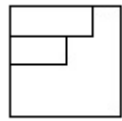
40503627741.



40503627742.



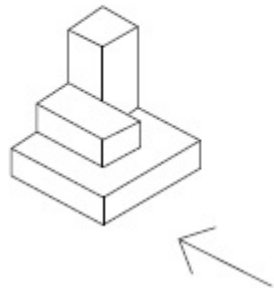
40503627743.



40503627744.

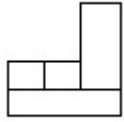
Question Number : 52 Question Id : 4050367594 Question Type : MCQ Option Shuffling : Yes Display Question Number : Yes Is Question Mandatory : No Single Line Question Option : No Option Orientation : Vertical Correct Marks : 4 Wrong Marks : 1

The 3 - D figure shows the view of an object. Identify the correct view in the direction of the arrow, from amongst the answer figures.

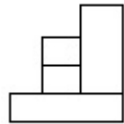


collegedunia.com
India's largest Student Review Platform

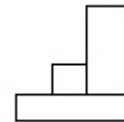
Options :



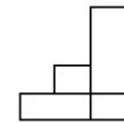
40503627745.



40503627746.



40503627747.



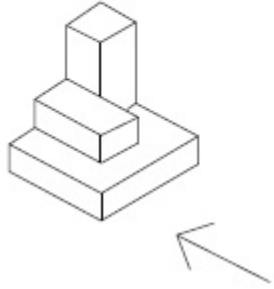
40503627748.

Question Number : 52 Question Id : 4050367594 Question Type : MCQ Option Shuffling : Yes Display Question Number : Yes Is Question Mandatory : No Single Line Question Option : No Option Orientation : Vertical Correct Marks : 4 Wrong Marks : 1

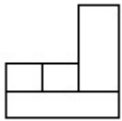


collegedunia.com
India's largest Student Review Platform

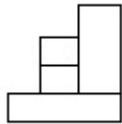
3 - D प्रश्न आकृति में एक वस्तु के एक दृश्य को दिखाया गया है। तीर की दिशा में देखते हुए, इसके सम्मुख दृश्य को उत्तर आकृतियों में से पहचानिये।



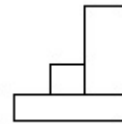
Options :



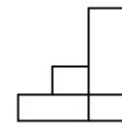
40503627745.



40503627746.



40503627747.



40503627748.

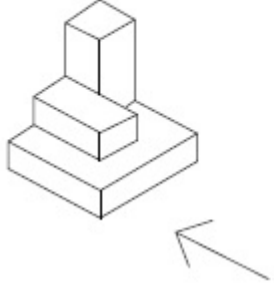


collegedunia.com

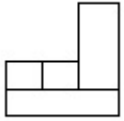
India's largest Student Review Platform

Question Number : 52 Question Id : 4050367594 Question Type : MCQ Option Shuffling : Yes Display Question Number : Yes Is Question Mandatory : No Single Line Question Option : No Option Orientation : Vertical Correct Marks : 4 Wrong Marks : 1

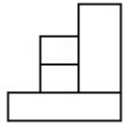
3 - D પ્રશ્ન આકૃતિ એક વસ્તુનું દૃશ્ય બતાવે છે. તીરની દિશામાં જોતાં, આનું સાચું દૃશ્ય જવાબ આકૃતિઓમાંથી શોધો.



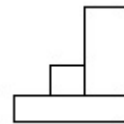
Options :



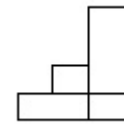
40503627745.



40503627746.



40503627747.



40503627748.

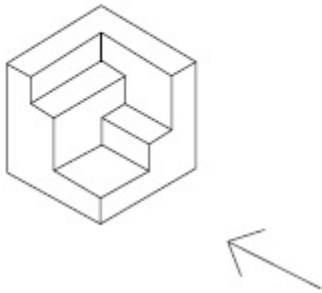


collegedunia.com
India's largest Student Review Platform

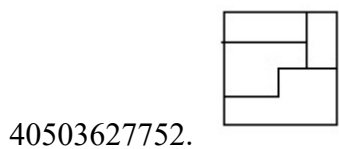
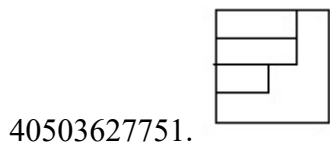
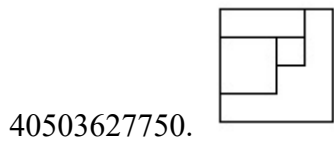
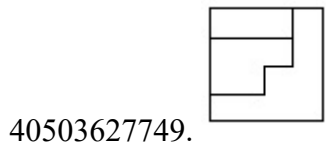
Question Number : 53 Question Id : 4050367595 Question Type : MCQ Option Shuffling : Yes Display Question Number : Yes Is Question Mandatory : No Single Line Question Option : No Option Orientation : Vertical

Correct Marks : 4 Wrong Marks : 1

The 3 - D figure shows the view of an object. Identify the correct view in the direction of the arrow, from amongst the answer figures.



Options :

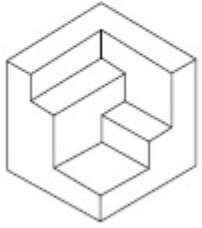


collegedunia.com
India's largest Student Review Platform

Question Number : 53 Question Id : 4050367595 Question Type : MCQ Option Shuffling : Yes Display Question Number : Yes Is Question Mandatory : No Single Line Question Option : No Option Orientation : Vertical

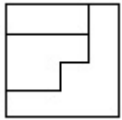
Correct Marks : 4 Wrong Marks : 1

3 - D प्रश्न आकृति में एक वस्तु के एक दृश्य को दिखाया गया है। तीर की दिशा में देखते हुए, इसके सम्मुख दृश्य को उत्तर आकृतियों में से पहचानिये।

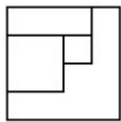


Options :

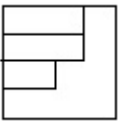
40503627749.



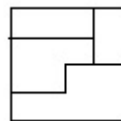
40503627750.



40503627751.



40503627752.

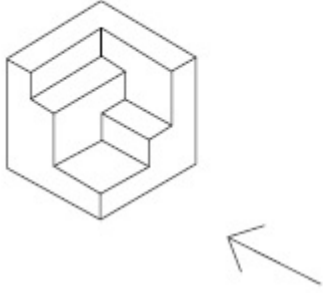


collegedunia.com

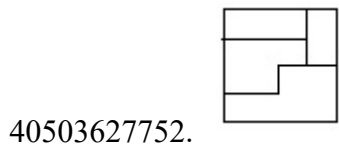
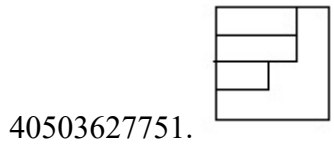
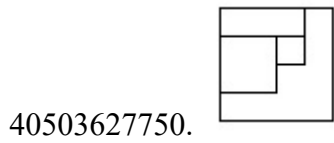
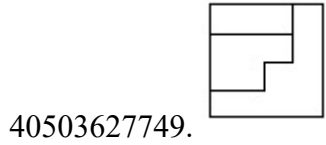
India's largest Student Review Platform

Question Number : 53 Question Id : 4050367595 Question Type : MCQ Option Shuffling : Yes Display Question Number : Yes Is Question Mandatory : No Single Line Question Option : No Option Orientation : Vertical Correct Marks : 4 Wrong Marks : 1

3 - D પ્રશ્ન આકૃતિ એક વસ્તુનું દૃશ્ય બતાવે છે. ત્રીસની દિશામાં જોતાં, આનું સાચું દૃશ્ય જવાબ આકૃતિઓમાંથી શોધો.



Options :

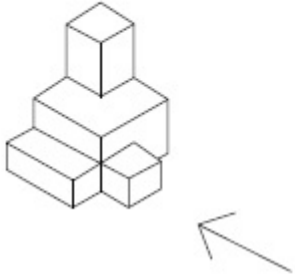


collegedunia.com
India's largest Student Review Platform

Question Number : 54 Question Id : 4050367596 Question Type : MCQ Option Shuffling : Yes Display Question Number : Yes Is Question Mandatory : No Single Line Question Option : No Option Orientation : Vertical

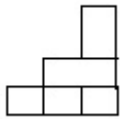
Correct Marks : 4 Wrong Marks : 1

The 3 - D figure shows the view of an object. Identify the correct view in the direction of the arrow, from amongst the answer figures.

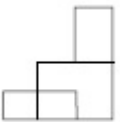


Options :

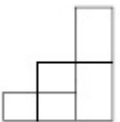
40503627753.



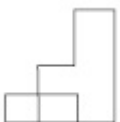
40503627754.



40503627755.



40503627756.



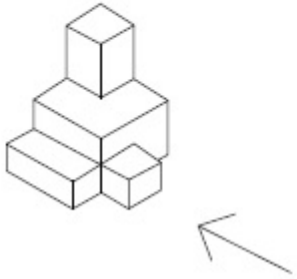
collegedunia.com

India's largest Student Review Platform

Question Number : 54 Question Id : 4050367596 Question Type : MCQ Option Shuffling : Yes Display Question Number : Yes Is Question Mandatory : No Single Line Question Option : No Option Orientation : Vertical

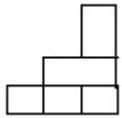
Correct Marks : 4 Wrong Marks : 1

3 - D प्रश्न आकृति में एक वस्तु के एक दृश्य को दिखाया गया है। तीर की दिशा में देखते हुए, इसके सम्मुख दृश्य को उत्तर आकृतियों में से पहचानिये।

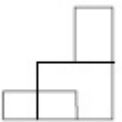


Options :

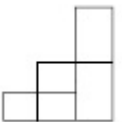
40503627753.



40503627754.



40503627755.



collegedunia.com

India's largest Student Review Platform

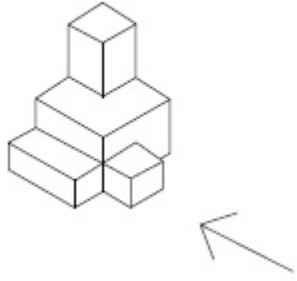


40503627756.

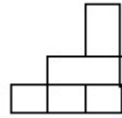
Question Number : 54 Question Id : 4050367596 Question Type : MCQ Option Shuffling : Yes Display Question Number : Yes Is Question Mandatory : No Single Line Question Option : No Option Orientation : Vertical

Correct Marks : 4 Wrong Marks : 1

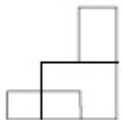
3 - D પ્રશ્ન આકૃતિ એક વસ્તુનું દૃશ્ય બતાવે છે. તીરની દિશામાં જોતાં, આનું સાચું દૃશ્ય જવાબ આકૃતિઓમાંથી શોધો.



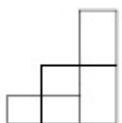
Options :



40503627753.



40503627754.



40503627755.



collegedunia.com

India's largest Student Review Platform

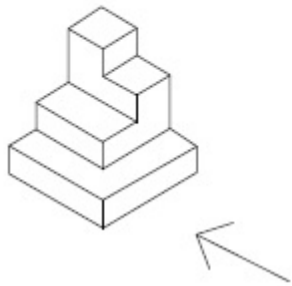


40503627756.

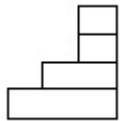
Question Number : 55 Question Id : 4050367597 Question Type : MCQ Option Shuffling : Yes Display Question Number : Yes Is Question Mandatory : No Single Line Question Option : No Option Orientation : Vertical

Correct Marks : 4 Wrong Marks : 1

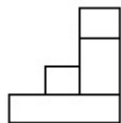
The 3 - D figure shows the view of an object. Identify the correct view in the direction of the arrow, from amongst the answer figures.



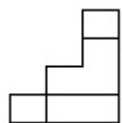
Options :



40503627757.



40503627758.



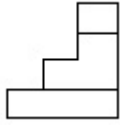
40503627759.



collegedunia.com

India's largest Student Review Platform

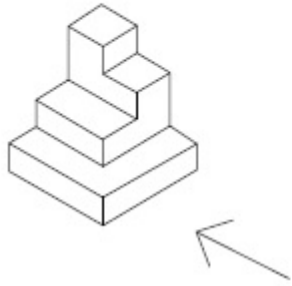
40503627760.



Question Number : 55 Question Id : 4050367597 Question Type : MCQ Option Shuffling : Yes Display Question Number : Yes Is Question Mandatory : No Single Line Question Option : No Option Orientation : Vertical

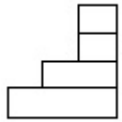
Correct Marks : 4 Wrong Marks : 1

3 - D प्रश्न आकृति में एक वस्तु के एक दृश्य को दिखाया गया है। तीर की दिशा में देखते हुए, इसके सम्मुख दृश्य को उत्तर आकृतियों में से पहचानिये।

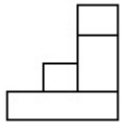


Options :

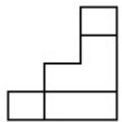
40503627757.



40503627758.



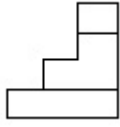
40503627759.



collegedunia.com

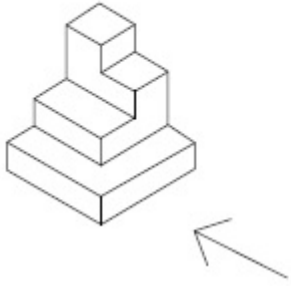
India's largest Student Review Platform

40503627760.



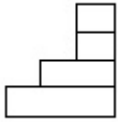
Question Number : 55 Question Id : 4050367597 Question Type : MCQ Option Shuffling : Yes Display Question Number : Yes Is Question Mandatory : No Single Line Question Option : No Option Orientation : Vertical Correct Marks : 4 Wrong Marks : 1

3 - D પ્રશ્ન આકૃતિ એક વસ્તુનું દશ્ય બતાવે છે. ત્રીસની દિશામાં જોતાં, આનું સાચું દશ્ય જવાબ આકૃતિઓમાંથી શોધો.

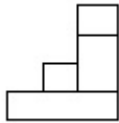


Options :

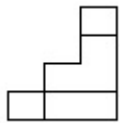
40503627757.



40503627758.



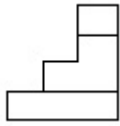
40503627759.



collegedunia.com

India's largest Student Review Platform

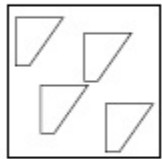
40503627760.



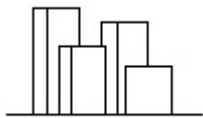
Question Number : 56 Question Id : 4050367598 Question Type : MCQ Option Shuffling : Yes Display Question Number : Yes Is Question Mandatory : No Single Line Question Option : No Option Orientation : Vertical

Correct Marks : 4 Wrong Marks : 1

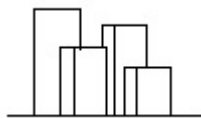
The problem figure shows the top view of objects. Looking in the direction of the arrow, identify the correct elevation, from amongst the answer figures.



Options :



40503627761.



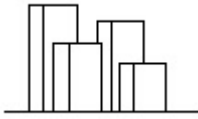
40503627762.



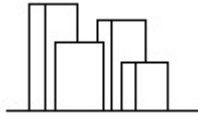
collegedunia.com

India's largest Student Review Platform

40503627763.

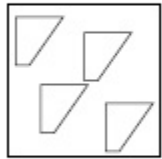


40503627764.

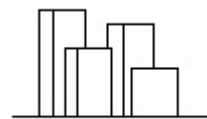


Question Number : 56 Question Id : 4050367598 Question Type : MCQ Option Shuffling : Yes Display Question Number : Yes Is Question Mandatory : No Single Line Question Option : No Option Orientation : Vertical Correct Marks : 4 Wrong Marks : 1

प्रश्न आकृति में वस्तुओं का ऊपरी दृश्य दिखाया गया है। तीर की सिंह में देखते हुए उत्तर आकृतियों में से सही सम्मुख दृश्य पहचानिये।



Options :



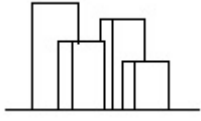
40503627761.



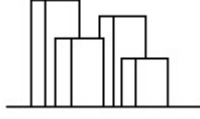
collegedunia.com

India's largest Student Review Platform

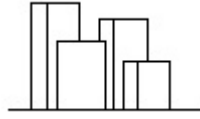
40503627762.



40503627763.

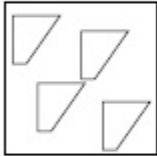


40503627764.



Question Number : 56 Question Id : 4050367598 Question Type : MCQ Option Shuffling : Yes Display Question Number : Yes Is Question Mandatory : No Single Line Question Option : No Option Orientation : Vertical Correct Marks : 4 Wrong Marks : 1

પ્રશ્ન આકૃતિ કોઈક વસ્તુઓનું ઉપરી દૃશ્ય (top view) બતાવે છે. ત્રીસની દિશામાં જોતાં, આનું સાચું ઉન્નત દૃશ્ય (elevation), જવાબ આકૃતિઓમાંથી શોધો.

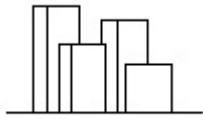


Options :



collegedunia.com

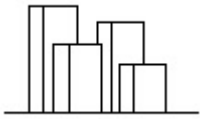
India's largest Student Review Platform



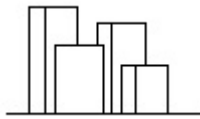
40503627761.



40503627762.



40503627763.

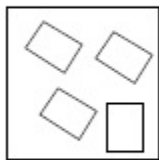


40503627764.

Question Number : 57 Question Id : 4050367599 Question Type : MCQ Option Shuffling : Yes Display Question Number : Yes Is Question Mandatory : No Single Line Question Option : No Option Orientation : Vertical

Correct Marks : 4 Wrong Marks : 1

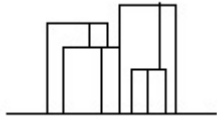
The problem figure shows the top view of objects. Looking in the direction of the arrow, identify the correct elevation, from amongst the answer figures.



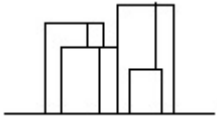
collegedunia.com

India's largest Student Review Platform

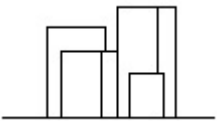
Options :



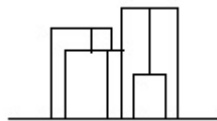
40503627765.



40503627766.



40503627767.



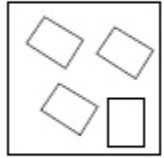
40503627768.

Question Number : 57 Question Id : 4050367599 Question Type : MCQ Option Shuffling : Yes Display Question Number : Yes Is Question Mandatory : No Single Line Question Option : No Option Orientation : Vertical Correct Marks : 4 Wrong Marks : 1



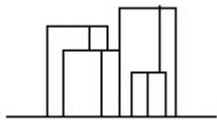
collegedunia.com
India's largest Student Review Platform

प्रश्न आकृति में वस्तुओं का ऊपरी दृश्य दिखाया गया है। तीर की सिंह में देखते हुए उत्तर आकृतियों में से सही सम्मुख दृश्य पहचानिये।

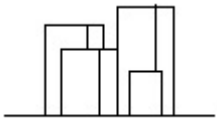


Options :

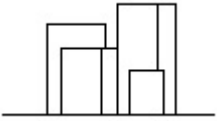
40503627765.



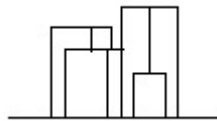
40503627766.



40503627767.



40503627768.



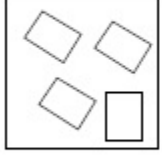
collegedunia.com

India's largest Student Review Platform

Question Number : 57 Question Id : 4050367599 Question Type : MCQ Option Shuffling : Yes Display Question Number : Yes Is Question Mandatory : No Single Line Question Option : No Option Orientation : Vertical

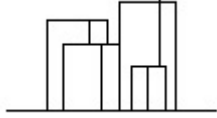
Correct Marks : 4 Wrong Marks : 1

પ્રશ્ન આકૃતિ કોઈક વસ્તુઓનું ઉપરી દૃશ્ય (top view) બતાવે છે. ત્રીસની દિશામાં જોતાં, આનું સાચું ઉન્નત દૃશ્ય (elevation), જવાબ આકૃતિઓમાંથી શોધો.

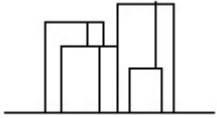


Options :

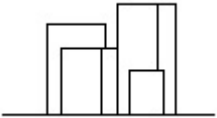
40503627765.



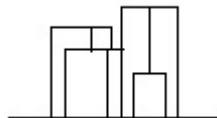
40503627766.



40503627767.



40503627768.

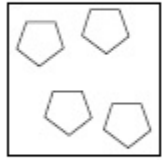


collegedunia.com

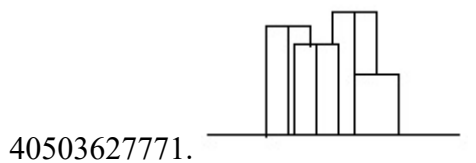
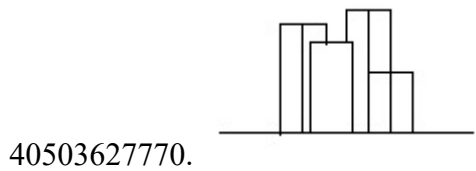
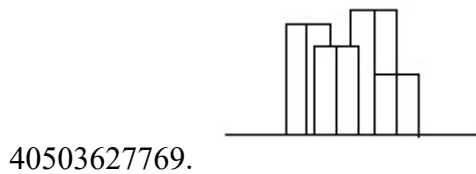
India's largest Student Review Platform

Question Number : 58 Question Id : 4050367600 Question Type : MCQ Option Shuffling : Yes Display Question Number : Yes Is Question Mandatory : No Single Line Question Option : No Option Orientation : Vertical Correct Marks : 4 Wrong Marks : 1

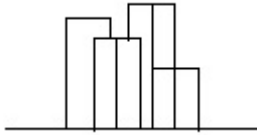
The problem figure shows the top view of objects. Looking in the direction of the arrow, identify the correct elevation, from amongst the answer figures.



Options :



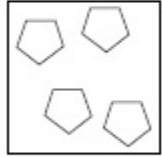
40503627772.



Question Number : 58 Question Id : 4050367600 Question Type : MCQ Option Shuffling : Yes Display Question Number : Yes Is Question Mandatory : No Single Line Question Option : No Option Orientation : Vertical

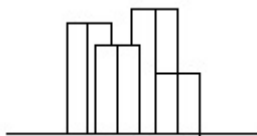
Correct Marks : 4 Wrong Marks : 1

प्रश्न आकृति में वस्तुओं का ऊपरी दृश्य दिखाया गया है। तीर की सह में देखते हुए उत्तर आकृतियों में से सही सम्मुख दृश्य पहचानिये।

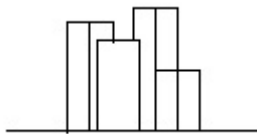


Options :

40503627769.



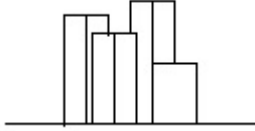
40503627770.



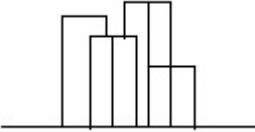
collegedunia.com

India's largest Student Review Platform

40503627771.



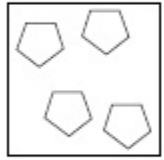
40503627772.



Question Number : 58 Question Id : 4050367600 Question Type : MCQ Option Shuffling : Yes Display Question Number : Yes Is Question Mandatory : No Single Line Question Option : No Option Orientation : Vertical

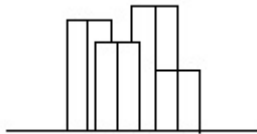
Correct Marks : 4 Wrong Marks : 1

પ્રશ્ન આકૃતિ કોઈક વસ્તુઓનું ઉપરી દૃશ્ય (top view) બતાવે છે. ત્રીરની દિશામાં જોતાં, આનું સાચું ઉન્નત દૃશ્ય (elevation), જવાબ આકૃતિઓમાંથી શોધો.



Options :

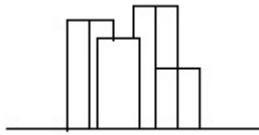
40503627769.



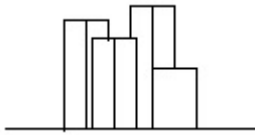
collegedunia.com

India's largest Student Review Platform

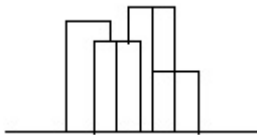
40503627770.



40503627771.

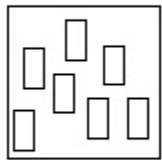


40503627772.



Question Number : 59 Question Id : 4050367601 Question Type : MCQ Option Shuffling : Yes Display Question Number : Yes Is Question Mandatory : No Single Line Question Option : No Option Orientation : Vertical Correct Marks : 4 Wrong Marks : 1

The problem figure shows the top view of objects. Looking in the direction of the arrow, identify the correct elevation, from amongst the answer figures.

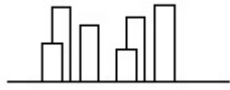


Options :

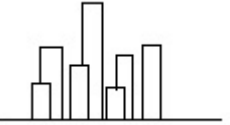


collegedunia.com

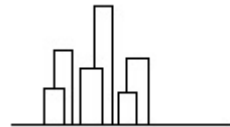
India's largest Student Review Platform



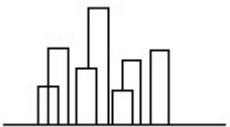
40503627773.



40503627774.



40503627775.



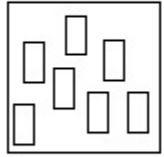
40503627776.

Question Number : 59 Question Id : 4050367601 Question Type : MCQ Option Shuffling : Yes Display Question Number : Yes Is Question Mandatory : No Single Line Question Option : No Option Orientation : Vertical Correct Marks : 4 Wrong Marks : 1

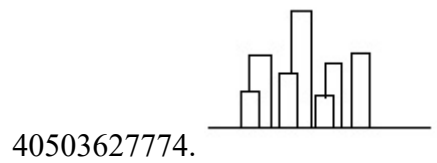
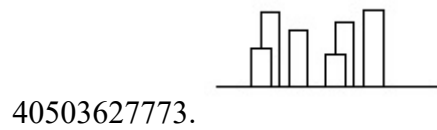


collegedunia.com
India's largest Student Review Platform

प्रश्न आकृति में वस्तुओं का ऊपरी दृश्य दिखाया गया है। तीर की सिंह में देखते हुए उत्तर आकृतियों में से सही सम्मुख दृश्य पहचानिये।



Options :

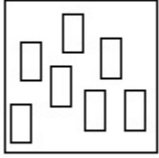


collegedunia.com
India's largest Student Review Platform

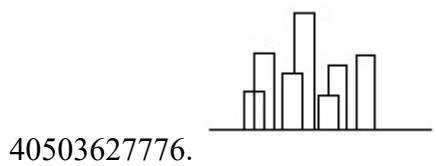
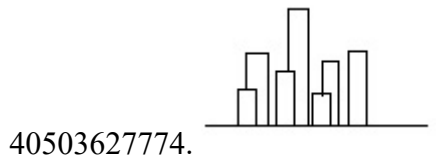
Question Mandatory : No Single Line Question Option : No Option Orientation : Vertical

Correct Marks : 4 Wrong Marks : 1

પ્રશ્ન આકૃતિ કોઈક વસ્તુઓનું ઉપરી દૃશ્ય (top view) બતાવે છે. ત્રીસની દિશામાં જોતાં, આનું સાચું ઉન્નત દૃશ્ય (elevation), જવાબ આકૃતિઓમાંથી શોધો.



Options :



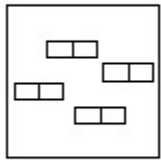
collegedunia.com

India's largest Student Review Platform

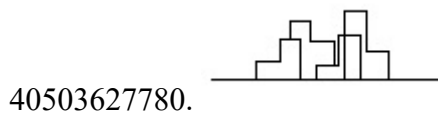
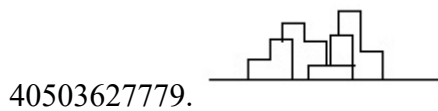
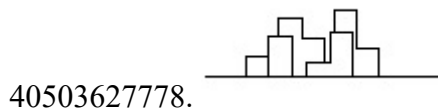
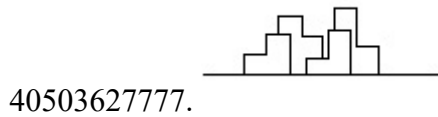
Question Number : 60 Question Id : 4050367602 Question Type : MCQ Option Shuffling : Yes Display Question Number : Yes Is Question Mandatory : No Single Line Question Option : No Option Orientation : Vertical

Correct Marks : 4 Wrong Marks : 1

The problem figure shows the top view of objects. Looking in the direction of the arrow, identify the correct elevation, from amongst the answer figures.



Options :



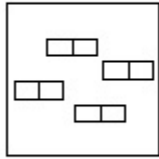
collegedunia.com
India's largest Student Review Platform

Question Number : 60 Question Id : 4050367602 Question Type : MCQ Option Shuffling : Yes Display Question Number : Yes Is

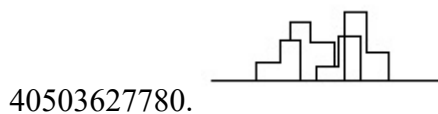
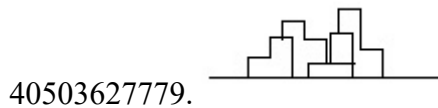
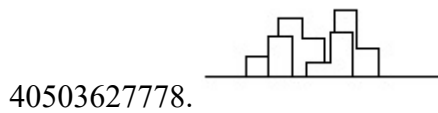
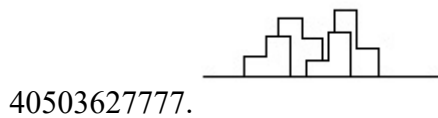
Question Mandatory : No Single Line Question Option : No Option Orientation : Vertical

Correct Marks : 4 Wrong Marks : 1

प्रश्न आकृति में वस्तुओं का ऊपरी दृश्य दिखाया गया है। तीर की सिंह में देखते हुए उत्तर आकृतियों में से सही सम्मुख दृश्य पहचानिये।



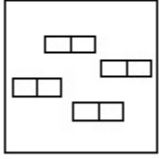
Options :



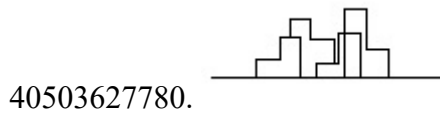
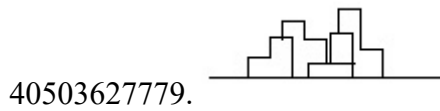
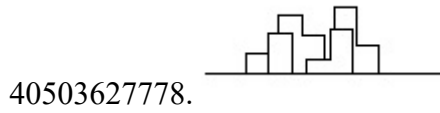
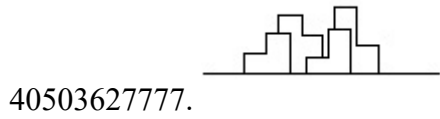
collegedunia.com

Question Number : 60 Question Id : 4050367602 Question Type : MCQ Option Shuffling : Yes Display Question Number : Yes Is Platform
Question Mandatory : No Single Line Question Option : No Option Orientation : Vertical
Correct Marks : 4 Wrong Marks : 1

પ્રશ્ન આકૃતિ કોઈક વસ્તુઓનું ઉપરી દૃશ્ય (top view) બતાવે છે. તીરની દિશામાં જોતાં, આનું સાચું ઉન્નત દૃશ્ય (elevation), જવાબ આકૃતિઓમાંથી શોધો.

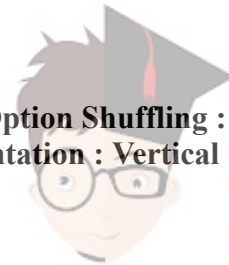


Options :



Question Number : 61 Question Id : 4050367603 Question Type : MCQ Option Shuffling : Yes Display Question Number : Yes Is Question Mandatory : No Single Line Question Option : No Option Orientation : Vertical Correct Marks : 4 Wrong Marks : 1

The White House is which one of the following ?



Options :

40503627781. Residence of Prime Minister of Germany
40503627782. Residence of Prime Minister of France
40503627783. Residence of Prime Minister of Spain
40503627784. Residence of President of USA

Question Number : 61 Question Id : 4050367603 Question Type : MCQ Option Shuffling : Yes Display Question Number : Yes Is Question Mandatory : No Single Line Question Option : No Option Orientation : Vertical Correct Marks : 4 Wrong Marks : 1

व्हाइट हाउस निम्नलिखित में से कौन सा है?

Options :

40503627781. जर्मनी के प्रधानमंत्री का निवास
40503627782. फ्रांस के प्रधानमंत्री का निवास
40503627783. स्पेन के प्रधानमंत्री का निवास
40503627784. संयुक्त राज्य अमेरिका के राष्ट्रपति का निवास

Question Number : 61 Question Id : 4050367603 Question Type : MCQ Option Shuffling : Yes Display Question Number : Yes Is Question Mandatory : No Single Line Question Option : No Option Orientation : Vertical Correct Marks : 4 Wrong Marks : 1



વ્હાઈટ હાઉસ નીચેનામાંથી શું છે ?

Options :

40503627781. જર્મની ના પ્રધાનમંત્રીનું નિવાસસ્થાન

40503627782. ફ્રાંસના પ્રધાનમંત્રીનું નિવાસસ્થાન

40503627783. સ્પેનના પ્રધાનમંત્રીનું નિવાસસ્થાન

40503627784. USA ના રાષ્ટ્રપતિનું નિવાસસ્થાન

Question Number : 62 Question Id : 4050367604 Question Type : MCQ Option Shuffling : Yes Display Question Number : Yes Is Question Mandatory : No Single Line Question Option : No Option Orientation : Vertical

Correct Marks : 4 Wrong Marks : 1

In the Northern Hemisphere the summer sun rises from which one of the following directions ?

Options :

40503627785. North East

40503627786. North West

40503627787. South East

40503627788. South West



collegedunia.com

India's largest Student Review Platform

Question Number : 62 Question Id : 4050367604 Question Type : MCQ Option Shuffling : Yes Display Question Number : Yes Is

Question Mandatory : No Single Line Question Option : No Option Orientation : Vertical

Correct Marks : 4 Wrong Marks : 1

उत्तरी गोलार्ध में गर्मियों में सूरज निम्न दिशाओं में से
किस एक दिशा से उगता है?

Options :

40503627785. उत्तर पूर्व

40503627786. उत्तर पश्चिम

40503627787. दक्षिण पूर्व

40503627788. दक्षिण पश्चिम

Question Number : 62 Question Id : 4050367604 Question Type : MCQ Option Shuffling : Yes Display Question Number : Yes Is

Question Mandatory : No Single Line Question Option : No Option Orientation : Vertical

Correct Marks : 4 Wrong Marks : 1

उत्तरी गोलार्धमां उनाणनो सूर्य नीयेनी दिशाओमांथी कई
दिशांमां उगे छे?

Options :

40503627785. उत्तर पूर्व

40503627786. उत्तर पश्चिम

40503627787. दक्षिण पूर्व

40503627788. दक्षिण पश्चिम



collegedunia.com

India's largest Student Review Platform

Question Number : 63 Question Id : 4050367605 Question Type : MCQ Option Shuffling : Yes Display Question Number : Yes Is Question Mandatory : No Single Line Question Option : No Option Orientation : Vertical

Correct Marks : 4 Wrong Marks : 1

In which of the following States is the Golden Temple located ?

Options :

40503627789. Haryana

40503627790. Punjab

40503627791. Assam

40503627792. Nagaland

Question Number : 63 Question Id : 4050367605 Question Type : MCQ Option Shuffling : Yes Display Question Number : Yes Is Question Mandatory : No Single Line Question Option : No Option Orientation : Vertical

Correct Marks : 4 Wrong Marks : 1

निम्नलिखित में से कौन से प्रदेश में स्वर्ण मंदिर स्थित है?

Options :

40503627789. हरियाणा

40503627790. पंजाब

40503627791. असम



collegedunia.com

India's largest Student Review Platform

40503627792. नागालैंड

Question Number : 63 Question Id : 4050367605 Question Type : MCQ Option Shuffling : Yes Display Question Number : Yes Is Question Mandatory : No Single Line Question Option : No Option Orientation : Vertical Correct Marks : 4 Wrong Marks : 1

सुवर्णमंदिर (Golden Temple) नीचेनामाना कया
राज्यमां आवेलुं छे ?

Options :

40503627789. हरियाणा

40503627790. पंजाब

40503627791. आसाम

40503627792. नागालैंड

Question Number : 64 Question Id : 4050367606 Question Type : MCQ Option Shuffling : Yes Display Question Number : Yes Is Question Mandatory : No Single Line Question Option : No Option Orientation : Vertical Correct Marks : 4 Wrong Marks : 1

What is the thickness of a one and a half
brick thick wall ?

Options :

40503627793. 9"

40503627794. 12"

40503627795. 18"



collegedunia.com
India's largest Student Review Platform

40503627796. 13.5"

Question Number : 64 Question Id : 4050367606 Question Type : MCQ Option Shuffling : Yes Display Question Number : Yes Is Question Mandatory : No Single Line Question Option : No Option Orientation : Vertical Correct Marks : 4 Wrong Marks : 1

डेढ़ ईट की मोटी दीवार की मोटाई कितनी होती है ?

Options :

40503627793. 9"

40503627794. 12"

40503627795. 18"

40503627796. 13.5"

Question Number : 64 Question Id : 4050367606 Question Type : MCQ Option Shuffling : Yes Display Question Number : Yes Is Question Mandatory : No Single Line Question Option : No Option Orientation : Vertical Correct Marks : 4 Wrong Marks : 1

दोढ़ ईट जडी दिवालनी जडाई केटली होय ?

Options :

40503627793. 9"

40503627794. 12"

40503627795. 18"

40503627796. 13.5"



collegedunia.com
India's largest Student Review Platform

Question Number : 65 Question Id : 4050367607 Question Type : MCQ Option Shuffling : Yes Display Question Number : Yes Is Question Mandatory : No Single Line Question Option : No Option Orientation : Vertical

Correct Marks : 4 Wrong Marks : 1

Which one amongst the following supports the masonry above doors and windows ?

Options :

40503627797. Foundation

40503627798. Lintel

40503627799. Slab

40503627800. Wooden frame

Question Number : 65 Question Id : 4050367607 Question Type : MCQ Option Shuffling : Yes Display Question Number : Yes Is Question Mandatory : No Single Line Question Option : No Option Orientation : Vertical

Correct Marks : 4 Wrong Marks : 1

निम्नलिखित में से कौन सा दरवाजे और खिड़कियों के ऊपर चिनाई का समर्थन करता है ?

Options :

40503627797. नींव

40503627798. लिंटल

40503627799. स्लैब



collegedunia.com

India's largest Student Review Platform

40503627800. लकड़ी का फ्रेम

Question Number : 65 Question Id : 4050367607 Question Type : MCQ Option Shuffling : Yes Display Question Number : Yes Is Question Mandatory : No Single Line Question Option : No Option Orientation : Vertical

Correct Marks : 4 Wrong Marks : 1

દરવાજા અને બારીઓના ઉપરના ભાગના ચણતરને નીચેનામાંથી શું ટેકો આપે છે?

Options :

40503627797. પાથો (Foundation)

40503627798. લિન્ટલ (Lintel)

40503627799. સ્લેબ (Slab)

40503627800. લાકડાની ફેમ (Wooden frame)

Question Number : 66 Question Id : 4050367608 Question Type : MCQ Option Shuffling : Yes Display Question Number : Yes Is Question Mandatory : No Single Line Question Option : No Option Orientation : Vertical

Correct Marks : 4 Wrong Marks : 1

The Leaning Tower in Italy is located in which one of the following cities ?

Options :

40503627801. Florence

40503627802. Venice



collegedunia.com

India's largest Student Review Platform

40503627803. Pisa

40503627804. Rome

Question Number : 66 Question Id : 4050367608 Question Type : MCQ Option Shuffling : Yes Display Question Number : Yes Is Question Mandatory : No Single Line Question Option : No Option Orientation : Vertical

Correct Marks : 4 Wrong Marks : 1

इटली का लीनिंग टावर निम्न में से किस शहर में स्थित है?

Options :

40503627801. फ्लोरेंस

40503627802. वेनिस

40503627803. पिसा

40503627804. रोम

Question Number : 66 Question Id : 4050367608 Question Type : MCQ Option Shuffling : Yes Display Question Number : Yes Is Question Mandatory : No Single Line Question Option : No Option Orientation : Vertical

Correct Marks : 4 Wrong Marks : 1

ईटलीमां आवेलो ढणतो भिनारो नीथेनामांना क्या शहरेमां आवेलो छे?

Options :

40503627801. इलोरेंस



collegedunia.com

India's largest Student Review Platform

40503627802. वेनिस

40503627803. पीसा

40503627804. रोम

Question Number : 67 Question Id : 4050367609 Question Type : MCQ Option Shuffling : Yes Display Question Number : Yes Is Question Mandatory : No Single Line Question Option : No Option Orientation : Vertical Correct Marks : 4 Wrong Marks : 1

Which one of the garden of the following is a terraced garden in Srinagar ?

Options :

40503627805. Nishat

40503627806. Vrindaban

40503627807. Buddha

40503627808. Nehru

Question Number : 67 Question Id : 4050367609 Question Type : MCQ Option Shuffling : Yes Display Question Number : Yes Is Question Mandatory : No Single Line Question Option : No Option Orientation : Vertical Correct Marks : 4 Wrong Marks : 1

निम्नलिखित में से कौन सा बहुस्तरोँ वाला एक बगीचा श्रीनगर में स्थित है ?

Options :

40503627805. निशात



collegedunia.com

India's largest Student Review Platform

40503627806. वृंदावन

40503627807. बुद्ध

40503627808. नेहरू

Question Number : 67 Question Id : 4050367609 Question Type : MCQ Option Shuffling : Yes Display Question Number : Yes Is Question Mandatory : No Single Line Question Option : No Option Orientation : Vertical Correct Marks : 4 Wrong Marks : 1

नीचेनामांथी कयो अेक भगीथो श्रीनगर स्थित अगासी भगीथो (terraced garden) छे ?

Options :

40503627805. निशात

40503627806. वृंदावन

40503627807. बुद्ध

40503627808. नेहरू

Question Number : 68 Question Id : 4050367610 Question Type : MCQ Option Shuffling : Yes Display Question Number : Yes Is Question Mandatory : No Single Line Question Option : No Option Orientation : Vertical Correct Marks : 4 Wrong Marks : 1

What amongst the following is the name of the famous museum in Hyderabad ?

Options :



collegedunia.com

India's largest Student Review Platform

40503627809. Falaknuma

40503627810. Salarjung

40503627811. Gandhi

40503627812. Nizam

Question Number : 68 Question Id : 4050367610 Question Type : MCQ Option Shuffling : Yes Display Question Number : Yes Is Question Mandatory : No Single Line Question Option : No Option Orientation : Vertical Correct Marks : 4 Wrong Marks : 1

निम्नलिखित में से कौन सा हैदराबाद के प्रसिद्ध संग्रहालय का नाम है?

Options :

40503627809. फलाकनुमा

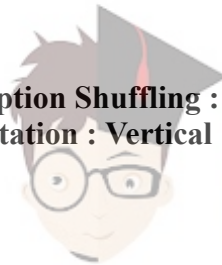
40503627810. सलारजंग

40503627811. गांधी

40503627812. निजाम

Question Number : 68 Question Id : 4050367610 Question Type : MCQ Option Shuffling : Yes Display Question Number : Yes Is Question Mandatory : No Single Line Question Option : No Option Orientation : Vertical Correct Marks : 4 Wrong Marks : 1

नीचेनामांथी, हैदराबादना अेक प्रसिद्ध संग्रहालय (museum) नुं नाम शुं छे?



collegedunia.com

India's largest Student Review Platform

Options :

40503627809. इलाकुनुमा

40503627810. सलारजंग

40503627811. गांधी

40503627812. निजाम

Question Number : 69 Question Id : 4050367611 Question Type : MCQ Option Shuffling : Yes Display Question Number : Yes Is Question Mandatory : No Single Line Question Option : No Option Orientation : Vertical Correct Marks : 4 Wrong Marks : 1

Which one of the color is made when blue and yellow are mixed ?

Options :

40503627813. Violet

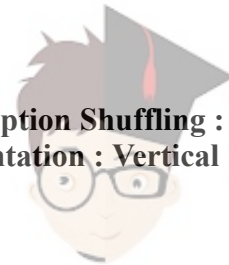
40503627814. Orange

40503627815. Green

40503627816. White

Question Number : 69 Question Id : 4050367611 Question Type : MCQ Option Shuffling : Yes Display Question Number : Yes Is Question Mandatory : No Single Line Question Option : No Option Orientation : Vertical Correct Marks : 4 Wrong Marks : 1

नीले और पीले रंग के मिश्रण से कौन सा रंग बनता है?



collegedunia.com

India's largest Student Review Platform

Options :

40503627813. बैंगनी

40503627814. नारंगी

40503627815. हरा

40503627816. सफेद

Question Number : 69 Question Id : 4050367611 Question Type : MCQ Option Shuffling : Yes Display Question Number : Yes Is Question Mandatory : No Single Line Question Option : No Option Orientation : Vertical Correct Marks : 4 Wrong Marks : 1

वाढणी अने पीणो रंग मेणवी क्यो रंग बनाववामां आवे छे?

Options :

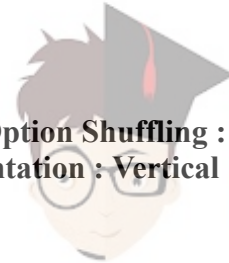
40503627813. जंभुडियो

40503627814. नारंगी

40503627815. लीलो

40503627816. सडेद

Question Number : 70 Question Id : 4050367612 Question Type : MCQ Option Shuffling : Yes Display Question Number : Yes Is Question Mandatory : No Single Line Question Option : No Option Orientation : Vertical Correct Marks : 4 Wrong Marks : 1



Which one of the following color suggests love and romance ?

Options :

40503627817. Blue

40503627818. Green

40503627819. Pink

40503627820. Brown

Question Number : 70 Question Id : 4050367612 Question Type : MCQ Option Shuffling : Yes Display Question Number : Yes Is Question Mandatory : No Single Line Question Option : No Option Orientation : Vertical Correct Marks : 4 Wrong Marks : 1

निम्न रंग में से कौन सा एक प्यार और रोमांस पता चलता है?

Options :

40503627817. नीला

40503627818. हरा

40503627819. गुलाबी

40503627820. भूरा



collegedunia.com
India's largest Student Review Platform

Question Number : 70 Question Id : 4050367612 Question Type : MCQ Option Shuffling : Yes Display Question Number : Yes Is

Question Mandatory : No Single Line Question Option : No Option Orientation : Vertical

Correct Marks : 4 Wrong Marks : 1

નીચેનામાંનો કયો રંગ પ્રેમ અને રોમાંચ (romance)

સૂચવે છે?

Options :

40503627817. વાદળી

40503627818. લીલો

40503627819. ગુલાબી

40503627820. તપખીરિયો

Question Number : 71 Question Id : 4050367613 Question Type : MCQ Option Shuffling : Yes Display Question Number : Yes Is

Question Mandatory : No Single Line Question Option : No Option Orientation : Vertical

Correct Marks : 4 Wrong Marks : 1

Which one of the following suggests the texture of the skin of the elderly persons ?

Options :

40503627821. Glossy

40503627822. Wrinkled

40503627823. Smooth

40503627824. Soft



collegedunia.com

India's largest Student Review Platform

Question Number : 71 Question Id : 4050367613 Question Type : MCQ Option Shuffling : Yes Display Question Number : Yes Is Question Mandatory : No Single Line Question Option : No Option Orientation : Vertical Correct Marks : 4 Wrong Marks : 1

निम्न में से कौन सा बुजुर्ग व्यक्तियों की त्वचा की बनावट का सुझाव देता है?

Options :

40503627821. चमकदार

40503627822. झुर्रीदार

40503627823. चिकना

40503627824. नरम

Question Number : 71 Question Id : 4050367613 Question Type : MCQ Option Shuffling : Yes Display Question Number : Yes Is Question Mandatory : No Single Line Question Option : No Option Orientation : Vertical Correct Marks : 4 Wrong Marks : 1

नीचेना टेक्स्चर (texture) मांथी प्रौढ वयना व्यक्तियोनी थामडीनुं टेक्स्चर क्युं छे?

Options :

40503627821. थमकदार

40503627822. करयलीवाणुं

40503627823. लीसुं

40503627824. नरम



collegedunia.com

India's largest Student Review Platform

Question Number : 72 Question Id : 4050367614 Question Type : MCQ Option Shuffling : Yes Display Question Number : Yes Is Question Mandatory : No Single Line Question Option : No Option Orientation : Vertical

Correct Marks : 4 Wrong Marks : 1

Which one of the following is fixed to drain water from a sloping roof ?

Options :

40503627825. Ridge

40503627826. Eave

40503627827. J. Bolt

40503627828. Gutter

Question Number : 72 Question Id : 4050367614 Question Type : MCQ Option Shuffling : Yes Display Question Number : Yes Is Question Mandatory : No Single Line Question Option : No Option Orientation : Vertical

Correct Marks : 4 Wrong Marks : 1

निम्न में से कौन-सा एक जल को छत से निकालने के लिए नियत किया गया है?

Options :

40503627825. रिज

40503627826. एव

40503627827. जे. बोल्ट



collegedunia.com

India's largest Student Review Platform

40503627828. गटर

Question Number : 72 Question Id : 4050367614 Question Type : MCQ Option Shuffling : Yes Display Question Number : Yes Is Question Mandatory : No Single Line Question Option : No Option Orientation : Vertical

Correct Marks : 4 Wrong Marks : 1

ढणती छत परथी पाएलीना निकास माटे नीचेनामांथी शुं
बेसाडवामां आवे छे?

Options :

40503627825. भोस (Ridge)

40503627826. नेव (Eave)

40503627827. जे. बोल्ड (J. Bolt)

40503627828. गटर (Gutter)

Question Number : 73 Question Id : 4050367615 Question Type : MCQ Option Shuffling : Yes Display Question Number : Yes Is Question Mandatory : No Single Line Question Option : No Option Orientation : Vertical

Correct Marks : 4 Wrong Marks : 1

Which one of the following is ideal flooring
for a cinema hall ?

Options :

40503627829. Granite

40503627830. Brick



collegedunia.com

India's largest Student Review Platform

40503627831. Marble

40503627832. Carpet

Question Number : 73 Question Id : 4050367615 Question Type : MCQ Option Shuffling : Yes Display Question Number : Yes Is Question Mandatory : No Single Line Question Option : No Option Orientation : Vertical

Correct Marks : 4 Wrong Marks : 1

निम्नलिखित में से कौन सा सिनेमा हॉल के लिए आदर्श फर्श है?

Options :

40503627829. ग्रेनाइट

40503627830. ईट

40503627831. संगमरमर

40503627832. कालीन

Question Number : 73 Question Id : 4050367615 Question Type : MCQ Option Shuffling : Yes Display Question Number : Yes Is Question Mandatory : No Single Line Question Option : No Option Orientation : Vertical

Correct Marks : 4 Wrong Marks : 1

सिनेमा हॉल माटे नीचेनामांथी क्युं भोंयतणिया (flooring) माटे आदर्श छे?

Options :

40503627829. ग्रेनाइट



collegedunia.com

India's largest Student Review Platform

40503627830. ईंट

40503627831. आरसपहाण (भार्भल)

40503627832. गालीओ

Question Number : 74 Question Id : 4050367616 Question Type : MCQ Option Shuffling : Yes Display Question Number : Yes Is Question Mandatory : No Single Line Question Option : No Option Orientation : Vertical Correct Marks : 4 Wrong Marks : 1

Who among the following is the architect of the Punjab Haryana High Court Building ?

Options :

40503627833. Maxwell Fry

40503627834. Le Corbusier

40503627835. Louis Kahn

40503627836. Geoffrey Bawa

Question Number : 74 Question Id : 4050367616 Question Type : MCQ Option Shuffling : Yes Display Question Number : Yes Is Question Mandatory : No Single Line Question Option : No Option Orientation : Vertical Correct Marks : 4 Wrong Marks : 1

पंजाब हरियाणा उच्च न्यायालय भवन का वास्तुकार निम्न में से कौन है?

Options :



collegedunia.com

India's largest Student Review Platform

40503627833. મૈક્સવેલ ફ્રાઈ

40503627834. લે કોર્બુસીર

40503627835. લૂઈસ કાહ

40503627836. જેફ્રી બાવા

Question Number : 74 Question Id : 4050367616 Question Type : MCQ Option Shuffling : Yes Display Question Number : Yes Is Question Mandatory : No Single Line Question Option : No Option Orientation : Vertical

Correct Marks : 4 Wrong Marks : 1

પંજાબ હરિયાણા ઉચ્ચ ન્યાયાલય ભવન ના વાસ્તુકાર
(સ્થપતિ) નીચેનામાંથી કોણ છે?

Options :

40503627833. મેક્સવેલ ફ્રાઈ

40503627834. લે કોર્બુસીર

40503627835. લૂઈસ કાહ

40503627836. જેફ્રી બાવા

Question Number : 75 Question Id : 4050367617 Question Type : MCQ Option Shuffling : Yes Display Question Number : Yes Is Question Mandatory : No Single Line Question Option : No Option Orientation : Vertical

Correct Marks : 4 Wrong Marks : 1



collegedunia.com

India's largest Student Review Platform

Which one among the following is used for water conservation ?

Options :

40503627837. Water drainage

40503627838. Water evaporation

40503627839. Water harvesting

40503627840. Water flowing

Question Number : 75 Question Id : 4050367617 Question Type : MCQ Option Shuffling : Yes Display Question Number : Yes Is

Question Mandatory : No Single Line Question Option : No Option Orientation : Vertical

Correct Marks : 4 Wrong Marks : 1

जल संरक्षण के लिए निम्नलिखित में से कौन सा प्रयोग किया जाता है?

Options :

40503627837. जल निकासी

40503627838. जल वाष्पीकरण

40503627839. जल संचयन

40503627840. जल प्रवाह



collegedunia.com

India's largest Student Review Platform

Question Number : 75 Question Id : 4050367617 Question Type : MCQ Option Shuffling : Yes Display Question Number : Yes Is

Question Mandatory : No Single Line Question Option : No Option Orientation : Vertical

Correct Marks : 4 Wrong Marks : 1

જળ સંરક્ષણ માટે નીચેનામાંથી શાનો ઉપયોગ કરવામાં આવે છે?

Options :

40503627837. જળ નિકાલ (Water drainage)

40503627838. જળ બાષ્પીભવન (Water evaporation)

40503627839. જળ સંચય (Water harvesting)

40503627840. જળ પ્રવાહ (Water flowing)

Section Id :

Section Number :

Section type :

Mandatory or Optional :

Number of Questions :

Number of Questions to be attempted :

Section Marks :

Display Number Panel :

Group All Questions :

Mark As Answered Required? :

Sub-Section Number :

Sub-Section Id :

Question Shuffling Allowed :

Planning

405036269

3

Online

Mandatory

25

25

100

Yes

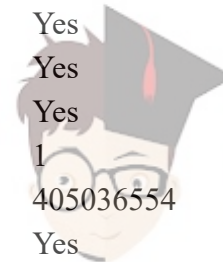
Yes

Yes

1

405036554

Yes



collegedunia.com

India's largest Student Review Platform

Question Number : 76 Question Id : 4050367618 Question Type : MCQ Option Shuffling : Yes Display Question Number : Yes Is Question Mandatory : No Single Line Question Option : No Option Orientation : Vertical Correct Marks : 4 Wrong Marks : 1

Secondary sector of economic activity is associated with :

Options :

40503627841. Agriculture

40503627842. Manufacturing

40503627843. Service

40503627844. Mining

Question Number : 76 Question Id : 4050367618 Question Type : MCQ Option Shuffling : Yes Display Question Number : Yes Is Question Mandatory : No Single Line Question Option : No Option Orientation : Vertical Correct Marks : 4 Wrong Marks : 1

आर्थिक गतिविधि का द्वितीयक (Secondary) क्षेत्र किस से सम्बंधित है ?

Options :

40503627841. कृषि

40503627842. निर्माण

40503627843. सेवा

40503627844. खनन



collegedunia.com

India's largest Student Review Platform

Question Number : 76 Question Id : 4050367618 Question Type : MCQ Option Shuffling : Yes Display Question Number : Yes Is Question Mandatory : No Single Line Question Option : No Option Orientation : Vertical Correct Marks : 4 Wrong Marks : 1

આર્થિક ગતિવિધીનું દ્વિતીયક ક્ષેત્રે નીચેના એક સાથે સંકળાયેલ છે.

Options :

40503627841. કૃષિ

40503627842. ખનાવટ

40503627843. સેવા

40503627844. ખાણકામ (ખનન)

Question Number : 77 Question Id : 4050367619 Question Type : MCQ Option Shuffling : Yes Display Question Number : Yes Is Question Mandatory : No Single Line Question Option : No Option Orientation : Vertical Correct Marks : 4 Wrong Marks : 1

Allocation of powers and functions between Union and State governments is given in which schedule of the Constitution of India ?

Options :

40503627845. First Schedule

40503627846. Third Schedule

40503627847. Fifth Schedule



collegedunia.com

India's largest Student Review Platform

40503627848. Seventh Schedule

Question Number : 77 Question Id : 4050367619 Question Type : MCQ Option Shuffling : Yes Display Question Number : Yes Is Question Mandatory : No Single Line Question Option : No Option Orientation : Vertical

Correct Marks : 4 Wrong Marks : 1

संघ तथा राज्य सरकारों के बीच शक्तियों तथा कार्यों का आवंटन भारतीय संविधान की किस अनुसूची में दिया गया है?

Options :

40503627845. पहली अनुसूची

40503627846. तीसरी अनुसूची

40503627847. पाँचवीं अनुसूची

40503627848. सातवीं अनुसूची

Question Number : 77 Question Id : 4050367619 Question Type : MCQ Option Shuffling : Yes Display Question Number : Yes Is Question Mandatory : No Single Line Question Option : No Option Orientation : Vertical

Correct Marks : 4 Wrong Marks : 1

કેન્દ્ર અને રાજ્ય સરકાર વચ્ચે સામર્થ્ય અને કાર્યની ફાળવણી ભારતના બંધારણની કઈ સૂચી (ચાદી) માં આપેલ છે?

Options :

40503627845. પ્રથમ સૂચિ (ચાદી)



collegedunia.com

India's largest Student Review Platform

40503627846. तृतीय सूचि

40503627847. पांचवी सूचि

40503627848. सातवी सूचि

Question Number : 78 Question Id : 4050367620 Question Type : MCQ Option Shuffling : Yes Display Question Number : Yes Is Question Mandatory : No Single Line Question Option : No Option Orientation : Vertical Correct Marks : 4 Wrong Marks : 1

Which of the following criteria is not the basis of classification of natural resources ?

Options :

40503627849. Exhaustibility

40503627850. Ownership

40503627851. Origin

40503627852. Climate

Question Number : 78 Question Id : 4050367620 Question Type : MCQ Option Shuffling : Yes Display Question Number : Yes Is Question Mandatory : No Single Line Question Option : No Option Orientation : Vertical Correct Marks : 4 Wrong Marks : 1

निम्न में से कौन सा मानदंड प्राकृतिक संसाधनों के वर्गीकरण का आधार नहीं है ?

Options :



collegedunia.com

India's largest Student Review Platform

40503627849. निर्वातनियता

40503627850. स्वामित्व

40503627851. स्रोत

40503627852. जलवायु

Question Number : 78 Question Id : 4050367620 Question Type : MCQ Option Shuffling : Yes Display Question Number : Yes Is Question Mandatory : No Single Line Question Option : No Option Orientation : Vertical Correct Marks : 4 Wrong Marks : 1

कुदरती संसाधनोनुं वर्गीकरुण नीचेना पैकी कया मापदंड पर आधारित नथी?

Options :

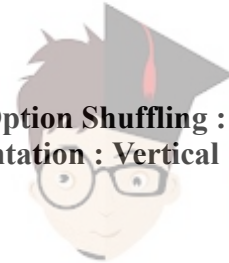
40503627849. अतमथरुठ ङपुं (निर्वातनियता)

40503627850. मासिकी

40503627851. मूल (स्रोत) (Origin)

40503627852. वातावरण

Question Number : 79 Question Id : 4050367621 Question Type : MCQ Option Shuffling : Yes Display Question Number : Yes Is Question Mandatory : No Single Line Question Option : No Option Orientation : Vertical Correct Marks : 4 Wrong Marks : 1



collegedunia.com

India's largest Student Review Platform

Who amongst the following was involved in design of New Delhi ?

Options :

40503627853. Sir Edwin Lutyens

40503627854. Le Corbusier

40503627855. Otto Konigsberger

40503627856. Patrick Geddes

Question Number : 79 Question Id : 4050367621 Question Type : MCQ Option Shuffling : Yes Display Question Number : Yes Is Question Mandatory : No Single Line Question Option : No Option Orientation : Vertical

Correct Marks : 4 Wrong Marks : 1

निम्न में से किसने नई दिल्ली का डिज़ाइन किया ?

Options :

40503627853. सर एडविन लुटियन

40503627854. ली कार्बुज़ियर

40503627855. ओटो कोनिग्स्बर्गर

40503627856. पैट्रिक गेडिस



collegedunia.com

India's largest Student Review Platform

Question Number : 79 Question Id : 4050367621 Question Type : MCQ Option Shuffling : Yes Display Question Number : Yes Is Question Mandatory : No Single Line Question Option : No Option Orientation : Vertical

Correct Marks : 4 Wrong Marks : 1

નવી દિલ્હી ની ડિઝાઇન (નક્શા) માં નીચે આપેલા માંથી કોણ સામેલ છે?

Options :

40503627853. સર એડ્વિન લ્યુટીન

40503627854. લી-કર્બુઝીયર

40503627855. ઓટો-કોનીઝબર્જર

40503627856. પેટ્રીક ગેડીસ

Question Number : 80 Question Id : 4050367622 Question Type : MCQ Option Shuffling : Yes Display Question Number : Yes Is Question Mandatory : No Single Line Question Option : No Option Orientation : Vertical

Correct Marks : 4 Wrong Marks : 1

Jawaharlal Nehru National Urban Renewal Mission (JNNURM) was launched in :

Options :

40503627857. 1970

40503627858. 1975

40503627859. 2005

40503627860. 2010



collegedunia.com

India's largest Student Review Platform

Question Number : 80 Question Id : 4050367622 Question Type : MCQ Option Shuffling : Yes Display Question Number : Yes Is

Question Mandatory : No Single Line Question Option : No Option Orientation : Vertical

Correct Marks : 4 Wrong Marks : 1

जवाहरलाल नेहरू राष्ट्रीय शहरी नवीकरण मिशन
(JNNURM) का शुभारंभ कब किया गया ?

Options :

40503627857. 1970 में

40503627858. 1975 में

40503627859. 2005 में

40503627860. 2010 में

Question Number : 80 Question Id : 4050367622 Question Type : MCQ Option Shuffling : Yes Display Question Number : Yes Is

Question Mandatory : No Single Line Question Option : No Option Orientation : Vertical

Correct Marks : 4 Wrong Marks : 1

जवाहरलाल नेहरू राष्ट्रीय शहरी नवीनीकरण मिशन
(JNNURM) क्यारे शङ्क थयेल हुतुं?

Options :

40503627857. 1970

40503627858. 1975

40503627859. 2005

40503627860. 2010



collegedunia.com

India's largest Student Review Platform

Question Number : 81 Question Id : 4050367623 Question Type : MCQ Option Shuffling : Yes Display Question Number : Yes Is Question Mandatory : No Single Line Question Option : No Option Orientation : Vertical Correct Marks : 4 Wrong Marks : 1

Which of the following does not involve community participation ?

Options :

- 40503627861. Demarcation of dense forests
- 40503627862. Urban Basic Services for the poor
- 40503627863. Joint Forest Management
- 40503627864. Beej Bachao Andolan

Question Number : 81 Question Id : 4050367623 Question Type : MCQ Option Shuffling : Yes Display Question Number : Yes Is Question Mandatory : No Single Line Question Option : No Option Orientation : Vertical Correct Marks : 4 Wrong Marks : 1

निम्न में से किस में समुदाय सहभागिता सम्मिलित नहीं है?

Options :

- 40503627861. घने जंगलों का सीमांकन
- 40503627862. गरीबों के लिए शहरी मूलभूत सेवाएं
- 40503627863. संयुक्त वन प्रबंधन
- 40503627864. बीज बचाओ आंदोलन



collegedunia.com
India's largest Student Review Platform

Question Number : 81 Question Id : 4050367623 Question Type : MCQ Option Shuffling : Yes Display Question Number : Yes Is Question Mandatory : No Single Line Question Option : No Option Orientation : Vertical

Correct Marks : 4 Wrong Marks : 1

નીચેના માંથી કયું એક સમુદાયની ભાગીદારી સાથે સંકળાયેલ નથી?

Options :

40503627861. ગાઢ જંગલોની સીમાંકન

40503627862. ગરીબો માટે શહેરી મૂળભૂત સેવાઓ

40503627863. સંયુક્ત વન સંચાલન

40503627864. બીજ બચાવો આંદોલન

Question Number : 82 Question Id : 4050367624 Question Type : MCQ Option Shuffling : Yes Display Question Number : Yes Is Question Mandatory : No Single Line Question Option : No Option Orientation : Vertical

Correct Marks : 4 Wrong Marks : 1

Out of Mohenjo-daro, Harappa, Lothal and Dholavira, which of the following cities were laid out on grid pattern ?

Options :

40503627865. Mohenjo-daro and Harappa

40503627866. Mohenjo-daro, Harappa and Dholavira

40503627867. Harappa and Lothal



collegedunia.com

India's largest Student Review Platform

Mohenjo-daro, Harappa, Dholavira
and Lothal

40503627868.

**Question Number : 82 Question Id : 4050367624 Question Type : MCQ Option Shuffling : Yes Display Question Number : Yes Is
Question Mandatory : No Single Line Question Option : No Option Orientation : Vertical
Correct Marks : 4 Wrong Marks : 1**

મોહનજો-દાડો, હડપ્પા, લોથલ તથા ધોલાવીરા મેં સે
કિન શહેરોં કો ગ્રિડ પૈટર્ન પર બનાયા ગયા ?

Options :

40503627865. મોહનજો-દાડો તથા હડપ્પા

40503627866. મોહનજો-દાડો, હડપ્પા તથા ધોલાવીરા

40503627867. હડપ્પા તથા લોથલ

40503627868. મોહનજો-દાડો, હડપ્પા, ધોલાવીરા તથા લોથલ

**Question Number : 82 Question Id : 4050367624 Question Type : MCQ Option Shuffling : Yes Display Question Number : Yes Is
Question Mandatory : No Single Line Question Option : No Option Orientation : Vertical
Correct Marks : 4 Wrong Marks : 1**

મોહેંજોદડો, હડપ્પા, લોથલ અને ધોલાવીરા માંથી કયું
શહેર ગ્રીડ (જાળી) સ્વરૂપ (ઢાંચો) ઉપર આધારિત છે ?

Options :

40503627865. મોહેંજોદડો અને હડપ્પા



collegedunia.com

India's largest Student Review Platform

40503627866. મોહૈંબ્રોદ્દડો, હડપ્પા અને ઘોલાવીરા

40503627867. હડપ્પા અને લોથલ

40503627868. મોહૈંબ્રોદ્દડો, હડપ્પા, ઘોલાવીરા અને લોથલ

Question Number : 83 Question Id : 4050367625 Question Type : MCQ Option Shuffling : Yes Display Question Number : Yes Is Question Mandatory : No Single Line Question Option : No Option Orientation : Vertical Correct Marks : 4 Wrong Marks : 1

What is the full form of IOT ?

Options :

40503627869. International Organisation for Trade

40503627870. Internet of Tweets

40503627871. Interest on Transactions

40503627872. Internet of Things

Question Number : 83 Question Id : 4050367625 Question Type : MCQ Option Shuffling : Yes Display Question Number : Yes Is Question Mandatory : No Single Line Question Option : No Option Orientation : Vertical Correct Marks : 4 Wrong Marks : 1

IOT का पूरा नाम (full form) क्या है?

Options :

40503627869. International Organisation for Trade



collegedunia.com

India's largest Student Review Platform

40503627870. Internet of Tweets

40503627871. Interest on Transactions

40503627872. Internet of Things

Question Number : 83 Question Id : 4050367625 Question Type : MCQ Option Shuffling : Yes Display Question Number : Yes Is Question Mandatory : No Single Line Question Option : No Option Orientation : Vertical Correct Marks : 4 Wrong Marks : 1

IOT નું આખું નામ શું છે?

Options :

40503627869. International Organisation for Trade

40503627870. Internet of Tweets

40503627871. Interest on Transactions

40503627872. Internet of Things

Question Number : 84 Question Id : 4050367626 Question Type : MCQ Option Shuffling : Yes Display Question Number : Yes Is Question Mandatory : No Single Line Question Option : No Option Orientation : Vertical Correct Marks : 4 Wrong Marks : 1

The Second United Nations Conference on 'Human Settlements Habitat II' was held in :

Options :

40503627873. Vancouver



collegedunia.com

India's largest Student Review Platform

40503627874. Kyoto

40503627875. Istanbul

40503627876. Quito

Question Number : 84 Question Id : 4050367626 Question Type : MCQ Option Shuffling : Yes Display Question Number : Yes Is Question Mandatory : No Single Line Question Option : No Option Orientation : Vertical Correct Marks : 4 Wrong Marks : 1

‘ह्यूमन सेटलमेंट्स हैबिटेट II’ पर दूसरा संयुक्त राष्ट्र सम्मेलन किस शहर में आयोजित किया गया था ?

Options :

40503627873. वैकूवर

40503627874. क्योटो

40503627875. इस्तान्बुल

40503627876. क्विटो

Question Number : 84 Question Id : 4050367626 Question Type : MCQ Option Shuffling : Yes Display Question Number : Yes Is Question Mandatory : No Single Line Question Option : No Option Orientation : Vertical Correct Marks : 4 Wrong Marks : 1

मानव वसाहतोनी वसवाट II उपर द्वितिय संयुक्त राष्ट्र सम्मेलन क्वां योजथेल હતું?

Options :



collegedunia.com

India's largest Student Review Platform

40503627873. चानकुंवर

40503627874. अओते

40503627875. ईस्तभभूल

40503627876. अलीते

Question Number : 85 Question Id : 4050367627 Question Type : MCQ Option Shuffling : Yes Display Question Number : Yes Is Question Mandatory : No Single Line Question Option : No Option Orientation : Vertical Correct Marks : 4 Wrong Marks : 1

The first Sub-urban Railway line in India started its operation in :

Options :

40503627877. 1857

40503627878. 1984

40503627879. 1901

40503627880. 1837

Question Number : 85 Question Id : 4050367627 Question Type : MCQ Option Shuffling : Yes Display Question Number : Yes Is Question Mandatory : No Single Line Question Option : No Option Orientation : Vertical Correct Marks : 4 Wrong Marks : 1

भारत में पहली उपनगरीय रेल लाइन का संचालन किस वर्ष शुरू हुआ ?



collegedunia.com

India's largest Student Review Platform

Options :

40503627877. 1857

40503627878. 1984

40503627879. 1901

40503627880. 1837

Question Number : 85 Question Id : 4050367627 Question Type : MCQ Option Shuffling : Yes Display Question Number : Yes Is Question Mandatory : No Single Line Question Option : No Option Orientation : Vertical

Correct Marks : 4 Wrong Marks : 1

ભારતમાં પ્રથમ ઉપનગરીય રેલ્વે લાઈન શરૂ થયા બાદ
કામગીરીમાં ક્યારે આવી?

Options :

40503627877. 1857

40503627878. 1984

40503627879. 1901

40503627880. 1837

Question Number : 86 Question Id : 4050367628 Question Type : MCQ Option Shuffling : Yes Display Question Number : Yes Is Question Mandatory : No Single Line Question Option : No Option Orientation : Vertical

Correct Marks : 4 Wrong Marks : 1

Which of the following cities is not planned
on a grid pattern ?



collegedunia.com

India's largest Student Review Platform

Options :

40503627881. Washington DC

40503627882. Amsterdam

40503627883. Barcelona

40503627884. New York

Question Number : 86 Question Id : 4050367628 Question Type : MCQ Option Shuffling : Yes Display Question Number : Yes Is Question Mandatory : No Single Line Question Option : No Option Orientation : Vertical Correct Marks : 4 Wrong Marks : 1

निम्न शहरों में से कौन सा ग्रिड पैटर्न पर नहीं बनाया गया ?

Options :

40503627881. वाशिंगटन डी.सी.

40503627882. एम्स्टर्डम

40503627883. बार्सिलोना

40503627884. न्यूयॉर्क

Question Number : 86 Question Id : 4050367628 Question Type : MCQ Option Shuffling : Yes Display Question Number : Yes Is Question Mandatory : No Single Line Question Option : No Option Orientation : Vertical Correct Marks : 4 Wrong Marks : 1



collegedunia.com

India's largest Student Review Platform

ग्रीड पेटर्न पर आयोजन नीचे आपेला शहरोमांथी क्युं नथी?

Options :

40503627881. वोशीगटन DC

40503627882. आभस्टरडेभ

40503627883. भार्सीलोन

40503627884. न्युयोर्क

Question Number : 87 Question Id : 4050367629 Question Type : MCQ Option Shuffling : Yes Display Question Number : Yes Is Question Mandatory : No Single Line Question Option : No Option Orientation : Vertical Correct Marks : 4 Wrong Marks : 1

The largest source of water pollution in India is due to :

Options :

40503627885. Small Scale Industries

40503627886. Agricultural Run-off

40503627887. Untreated Sewage

40503627888. Large Scale Industries



collegedunia.com

India's largest Student Review Platform

Question Number : 87 Question Id : 4050367629 Question Type : MCQ Option Shuffling : Yes Display Question Number : Yes Is Question Mandatory : No Single Line Question Option : No Option Orientation : Vertical

Correct Marks : 4 Wrong Marks : 1

भारत में जल प्रदूषण का सबसे बड़ा स्रोत है :

Options :

40503627885. लघु उद्योग

40503627886. कृषि अपवाह

40503627887. अनुपचारित सीवेज

40503627888. बड़े उद्योग

Question Number : 87 Question Id : 4050367629 Question Type : MCQ Option Shuffling : Yes Display Question Number : Yes Is Question Mandatory : No Single Line Question Option : No Option Orientation : Vertical

Correct Marks : 4 Wrong Marks : 1

भारतमां सौथी वधु वण प्रदूषण नो स्रोत नुं करण शोधो.

Options :

40503627885. नाना पायाना उद्योगो

40503627886. भेती अंध

40503627887. ट्रीट (सारवार)न करायेल गटर

40503627888. भोटा पायाना उद्योगो



collegedunia.com

India's largest Student Review Platform

Question Number : 88 Question Id : 4050367630 Question Type : MCQ Option Shuffling : Yes Display Question Number : Yes Is Question Mandatory : No Single Line Question Option : No Option Orientation : Vertical Correct Marks : 4 Wrong Marks : 1

What is indicated by a contour line on a topographical map ?

Options :

40503627889. Height

40503627890. Administrative Boundary

40503627891. Vegetation

40503627892. Water Body

Question Number : 88 Question Id : 4050367630 Question Type : MCQ Option Shuffling : Yes Display Question Number : Yes Is Question Mandatory : No Single Line Question Option : No Option Orientation : Vertical Correct Marks : 4 Wrong Marks : 1

एक स्थलाकृतिक (topographical) नक्शे पर समोच्च (contour) रेखा क्या दर्शाती है ?

Options :

40503627889. ऊँचाई

40503627890. प्रशासनिक सीमा

40503627891. वनस्पतियाँ

40503627892. जल स्रोत



collegedunia.com

India's largest Student Review Platform

Question Number : 88 Question Id : 4050367630 Question Type : MCQ Option Shuffling : Yes Display Question Number : Yes Is Question Mandatory : No Single Line Question Option : No Option Orientation : Vertical

Correct Marks : 4 Wrong Marks : 1

સ્થલાકૃતિક (ટોપોગ્રાફીક) નક્શા ઉપર સમોચ્ચ રેખા વઢે શું પ્રદર્શિત થાય છે?

Options :

40503627889. ઊંચાઈ

40503627890. વહીવટી સીમા

40503627891. વનસ્પતિ

40503627892. વોટર બોડી (જલ સ્ત્રોત)

Question Number : 89 Question Id : 4050367631 Question Type : MCQ Option Shuffling : Yes Display Question Number : Yes Is Question Mandatory : No Single Line Question Option : No Option Orientation : Vertical

Correct Marks : 4 Wrong Marks : 1

The ratio that shows a relationship between the distance on a map and the actual distance on ground is known as :

Options :

40503627893. Direction

40503627894. Key map

40503627895. Scale



collegedunia.com

India's largest Student Review Platform

40503627896. Isotherm

Question Number : 89 Question Id : 4050367631 Question Type : MCQ Option Shuffling : Yes Display Question Number : Yes Is Question Mandatory : No Single Line Question Option : No Option Orientation : Vertical

Correct Marks : 4 Wrong Marks : 1

वह अनुपात, जो नक्शे पर दूरी तथा धरातल पर वास्तविक दूरी के बीच एक सम्बंध को दिखाता है, निम्न में से किस से जाना जाता है?

Options :

40503627893. दिशा

40503627894. निर्देश मानचित्र

40503627895. स्केल

40503627896. समताप

Question Number : 89 Question Id : 4050367631 Question Type : MCQ Option Shuffling : Yes Display Question Number : Yes Is Question Mandatory : No Single Line Question Option : No Option Orientation : Vertical

Correct Marks : 4 Wrong Marks : 1

नक्शा उपर बतावेल अंतर अने भूमि उपरनुं वास्तविक अंतर नी वर्येनो संबंघनो गुणोत्तर के जे नीचेना तरीके ओणभाय :

Options :

40503627893. दिशा



collegedunia.com

India's largest Student Review Platform

40503627894. કી નક્શો (નિર્દેશ નક્શો)

40503627895. સ્કેલ (માપ)

40503627896. સમતાપ

Question Number : 90 Question Id : 4050367632 Question Type : MCQ Option Shuffling : Yes Display Question Number : Yes Is Question Mandatory : No Single Line Question Option : No Option Orientation : Vertical Correct Marks : 4 Wrong Marks : 1

Find the correct match :

(P) Dhanbad	(I) Textile
(Q) Kandla	(II) Mining
(R) Bokaro	(III) Port
(S) Surat	(IV) Steel Industry

Options :

40503627897. (P)-(II), (Q)-(I), (R)-(III), (S)-(IV)

40503627898. (P)-(I), (Q)-(III), (R)-(II), (S)-(IV)

40503627899. (P)-(III), (Q)-(II), (R)-(IV), (S)-(I)

40503627900. (P)-(II), (Q)-(III), (R)-(IV), (S)-(I)



collegedunia.com

India's largest Student Review Platform

Question Number : 90 Question Id : 4050367632 Question Type : MCQ Option Shuffling : Yes Display Question Number : Yes Is Question Mandatory : No Single Line Question Option : No Option Orientation : Vertical Correct Marks : 4 Wrong Marks : 1

सही मिलान ज्ञात कीजिए :

- | | |
|------------|-------------------|
| (P) धनबाद | (I) कपड़ा |
| (Q) कांडला | (II) खनन |
| (R) बोकारो | (III) बंदरगाह |
| (S) सूत | (IV) स्टील उद्योग |

Options :

40503627897. (P)-(II), (Q)-(I), (R)-(III), (S)-(IV)

40503627898. (P)-(I), (Q)-(III), (R)-(II), (S)-(IV)

40503627899. (P)-(III), (Q)-(II), (R)-(IV), (S)-(I)

40503627900. (P)-(II), (Q)-(III), (R)-(IV), (S)-(I)

Question Number : 90 Question Id : 4050367632 Question Type : MCQ Option Shuffling : Yes Display Question Number : Yes Is Question Mandatory : No Single Line Question Option : No Option Orientation : Vertical Correct Marks : 4 Wrong Marks : 1

साथी जोड़ी शोधो :

- | | |
|------------|-------------------|
| (P) धनबाद | (I) कपड़ा |
| (Q) कांडला | (II) खनन |
| (R) बोकारो | (III) बंदरगाह |
| (S) सूत | (IV) स्टील उद्योग |

Options :

40503627897. (P)-(II), (Q)-(I), (R)-(III), (S)-(IV)



collegedunia.com

India's largest Student Review Platform

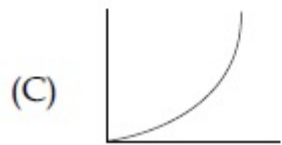
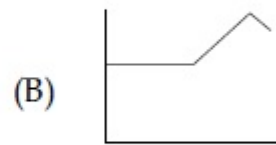
40503627898. (P)-(I), (Q)-(III), (R)-(II), (S)-(IV)

40503627899. (P)-(III), (Q)-(II), (R)-(IV), (S)-(I)

40503627900. (P)-(II), (Q)-(III), (R)-(IV), (S)-(I)

Question Number : 91 Question Id : 4050367633 Question Type : MCQ Option Shuffling : Yes Display Question Number : Yes Is Question Mandatory : No Single Line Question Option : No Option Orientation : Vertical Correct Marks : 4 Wrong Marks : 1

Select the indicative graph that best fits the Statement : "Car prices rose steadily, dropped a little and are now holding steady".



Options :

40503627901. (A)

40503627902. (B)

40503627903. (D)

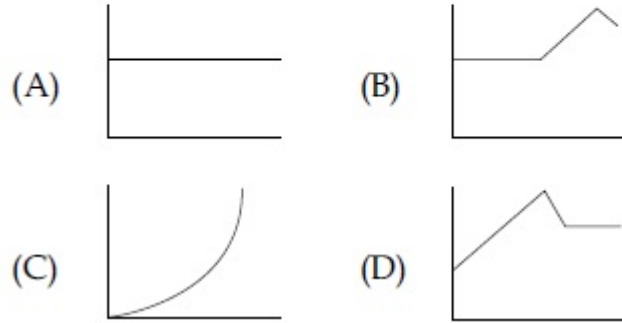
40503627904. Both (C) and (D)



collegedunia.com
India's largest Student Review Platform

Question Number : 91 Question Id : 4050367633 Question Type : MCQ Option Shuffling : Yes Display Question Number : Yes Is Question Mandatory : No Single Line Question Option : No Option Orientation : Vertical Correct Marks : 4 Wrong Marks : 1

कथन “कार की कीमतें नियमित रूप से बढ़ी, थोड़ा कम हुई तथा अब स्थिर हैं” पर सबसे अधिक फिट होने वाले सांकेतिक लेखाचित्र को चुनिए :



Options :

40503627901. (A)

40503627902. (B)

40503627903. (D)

40503627904. (C) तथा (D) दोनों

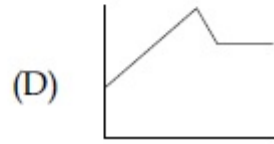
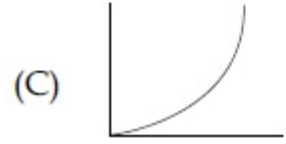
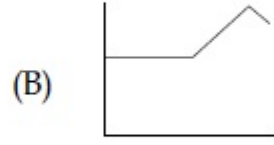
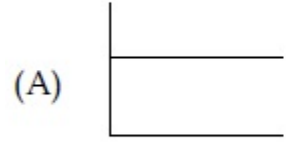
Question Number : 91 Question Id : 4050367633 Question Type : MCQ Option Shuffling : Yes Display Question Number : Yes Is Question Mandatory : No Single Line Question Option : No Option Orientation : Vertical Correct Marks : 4 Wrong Marks : 1



collegedunia.com
India's largest Student Review Platform

આપેલા વિધાનને બંધબેસતો સૂચક ગ્રાફ પસંદ કરો.

વિધાન : કાર ની કિંમતો સતત વધી, થોડીક ઘટી અને હવે સ્થિર છે.



Options :

40503627901. (A)

40503627902. (B)

40503627903. (D)

40503627904. (C) અને (D) બંને

Question Number : 92 Question Id : 4050367634 Question Type : MCQ Option Shuffling : Yes Display Question Number : Yes Is

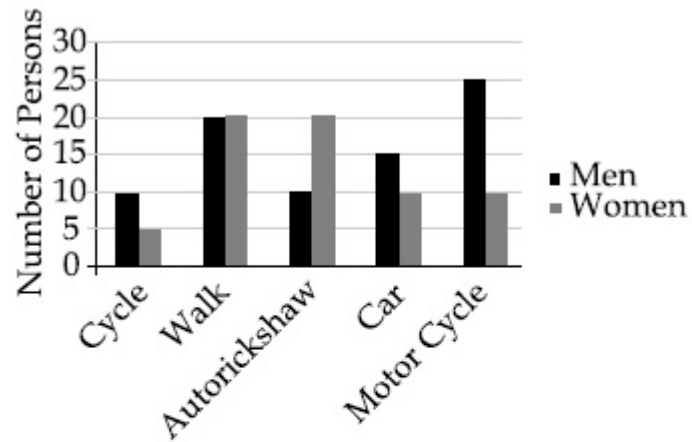
Question Mandatory : No Single Line Question Option : No Option Orientation : Vertical

Correct Marks : 4 Wrong Marks : 1



collegedunia.com

India's largest Student Review Platform



The diagram above shows the number of men and women using different modes of transport to commute to their work place.

Which of these statements is the correct answer ?

Options :

40503627905. 50% of all those who cycle to their work places are women

40503627906. More men compared to women use auto-rickshaw for commuting to work place

40503627907. More women compared to men cycle to their work place

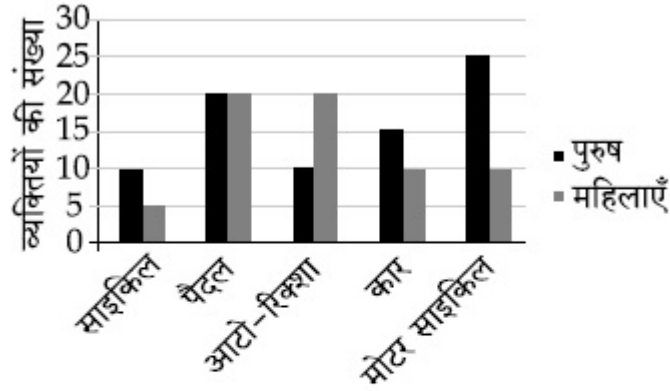
40503627908. The highest share of persons walk to their work place



collegedunia.com

India's largest Student Review Platform

Question Number : 92 Question Id : 4050367634 Question Type : MCQ Option Shuffling : Yes Display Question Number : Yes Is Question Mandatory : No Single Line Question Option : No Option Orientation : Vertical Correct Marks : 4 Wrong Marks : 1



उपरोक्त आरेख परिवहन के भिन्न तरीकों से अपने कार्य स्थल पर जाने वाले पुरुषों तथा महिलाओं की संख्या दिखाता है।

इन कथनों में से कौन सा सही उत्तर है?

Options :

40503627905. उन सभी, जो साइकिल से अपने कार्य स्थल पर जाते हैं, का 50% महिलाएँ हैं।

40503627906. कार्य स्थल पर जाने के लिए महिलाओं की तुलना में अधिक पुरुष आटो-रिक्शा का इस्तेमाल करते हैं।

40503627907. पुरुषों की तुलना में अधिक महिलाएँ साइकिल से अपने कार्य स्थल पर जाती हैं।

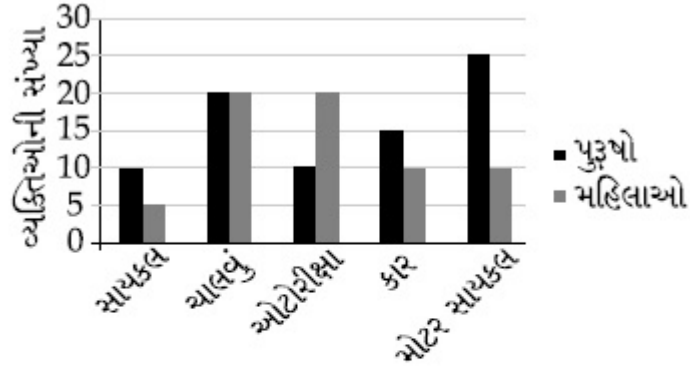


collegedunia.com
India's largest Student Review Platform

વ્યક્તિયોં કા સબસે અધિક ભાગ અપને કાર્ય
સ્થલ પર પૈદલ જાતા હૈ।

40503627908.

Question Number : 92 Question Id : 4050367634 Question Type : MCQ Option Shuffling : Yes Display Question Number : Yes Is
Question Mandatory : No Single Line Question Option : No Option Orientation : Vertical
Correct Marks : 4 Wrong Marks : 1



ઉપર નો આલેખ પુરૂષો અને મહિલાઓ ની સંખ્યા દ્વારા
ઉપયોગમાં લેવાતા જુદા જુદા પરિવહન ની રીતો કે જે
તેમના કાર્યસ્થળ પર ની મુસાફરી બતાવે છે.

આપેલા વિધાનોમાંથી કયો સાચો ઉત્તર બતાવે છે?

Options :

40503627905. કાર્યસ્થળ પર સાયકલ લઇને જનારા લોકોમાં 50%
મહિલાઓ છે.

40503627906. સ્ત્રીઓની સરખામણીમાં વધારે પુરૂષોએ કાર્યસ્થળ
ઉપર જવા માટે ઓટોરીક્ષા નો ઉપયોગ કર્યો.



collegedunia.com

India's largest Student Review Platform

પુરુષોની સરખામણીમાં વધુ સ્ત્રીઓ સાયકલ લઇને
તેમના કાર્યસ્થળ ઉપર ગયા.





40503627907.

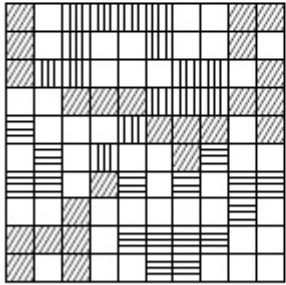
વ્યક્તિઓનો સૌથી મોટો ફાળો કાર્યસ્થળ ઉપર
ચાલીને જનારાઓ નો છે.

40503627908.

**Question Number : 93 Question Id : 4050367635 Question Type : MCQ Option Shuffling : Yes Display Question Number : Yes Is
Question Mandatory : No Single Line Question Option : No Option Orientation : Vertical
Correct Marks : 4 Wrong Marks : 1**

One site is divided into 10×10 units as
shown in the figure. It has following
classification of land area.

- (A) Waste land 
(B) Forest land 
(C) Agriculture land 
(D) Unused land 



Which of the following classification has
the highest amount of land ?

Options :

40503627909. Waste land



collegedunia.com

India's largest Student Review Platform

40503627910. Forest land

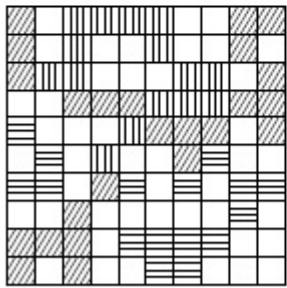
40503627911. Agriculture land

40503627912. Unused land

Question Number : 93 Question Id : 4050367635 Question Type : MCQ Option Shuffling : Yes Display Question Number : Yes Is Question Mandatory : No Single Line Question Option : No Option Orientation : Vertical Correct Marks : 4 Wrong Marks : 1

लेखाचित्र में दर्शाए अनुसार एक साइट को 10×10 इकाइयों में विभाजित किया गया है। भूमि क्षेत्र का वर्गीकरण निम्न है :

- (A) बंजर भूमि
- (B) जंगल भूमि
- (C) कृषि भूमि
- (D) अप्रयुक्त भूमि



निम्न दिए किस वर्गीकरण में सबसे अधिक भूमि है।

Options :

40503627909. बंजर भूमि



collegedunia.com

India's largest Student Review Platform

40503627910. જંગલ ભૂમિ

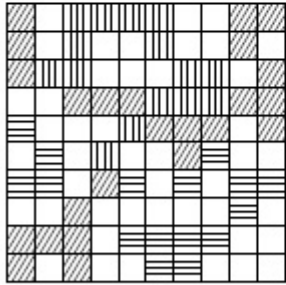
40503627911. કૃષિ ભૂમિ

40503627912. અપ્રયુક્ત ભૂમિ

Question Number : 93 Question Id : 4050367635 Question Type : MCQ Option Shuffling : Yes Display Question Number : Yes Is Question Mandatory : No Single Line Question Option : No Option Orientation : Vertical Correct Marks : 4 Wrong Marks : 1

એક સ્થળનું 10×10 એકમો માં વિભાજન આકૃતિમાં દર્શાવેલ છે. તેમનું જમીન વિસ્તારનું વર્ગીકરણ નીચે આપેલ છે.

- (A) કચરો (નકામી) ભૂમિ
- (B) વન ભૂમિ
- (C) ખેતીલાયક ભૂમિ
- (D) વણવપરાયેલ ભૂમિ



નીચે આપેલ કયા વર્ગીકરણમાં જમીનની માત્રા સૌથી વધારે ધરાવે છે તે ઓળખી બતાવો ?

Options :



collegedunia.com

India's largest Student Review Platform

40503627909. नकामी (कचरो) भूमि

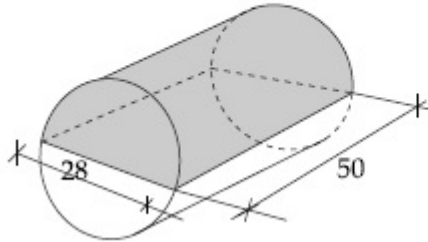
40503627910. वन भूमि

40503627911. भेतीलायक भूमि

40503627912. वाशवपरायेल भूमि

Question Number : 94 Question Id : 4050367636 Question Type : MCQ Option Shuffling : Yes Display Question Number : Yes Is Question Mandatory : No Single Line Question Option : No Option Orientation : Vertical Correct Marks : 4 Wrong Marks : 1

In the given figure the volume of the shaded portion is :



Options :

40503627913. 46,200

40503627914. 30,800

40503627915. 15,400

40503627916. 7,700

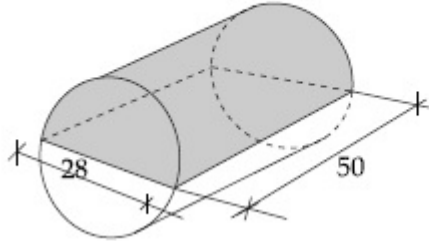


collegedunia.com

India's largest Student Review Platform

Question Number : 94 Question Id : 4050367636 Question Type : MCQ Option Shuffling : Yes Display Question Number : Yes Is Question Mandatory : No Single Line Question Option : No Option Orientation : Vertical Correct Marks : 4 Wrong Marks : 1

दिए गए रेखाचित्र में छायांकित भाग का आयतन है :



Options :

40503627913. 46,200

40503627914. 30,800

40503627915. 15,400

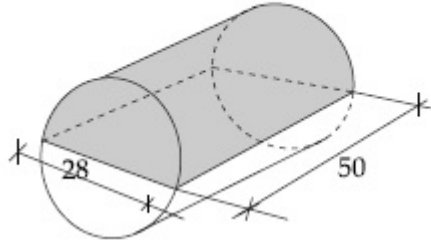
40503627916. 7,700

Question Number : 94 Question Id : 4050367636 Question Type : MCQ Option Shuffling : Yes Display Question Number : Yes Is Question Mandatory : No Single Line Question Option : No Option Orientation : Vertical Correct Marks : 4 Wrong Marks : 1



collegedunia.com
India's largest Student Review Platform

આપેલ આકૃતિમાં આરજાદિત ભાગનું કદ શોધો :



Options :

40503627913. 46,200

40503627914. 30,800

40503627915. 15,400

40503627916. 7,700

Question Number : 95 Question Id : 4050367637 Question Type : MCQ Option Shuffling : Yes Display Question Number : Yes Is Question Mandatory : No Single Line Question Option : No Option Orientation : Vertical

Correct Marks : 4 Wrong Marks : 1

Following table gives the number of families according to family size. What is the average family size ? (Rounded off to one decimal)

S.No.	Family size (persons)	No. of families
1.	3	300
2.	4	200
3.	5	400
4.	6	400

Options :



collegedunia.com

India's largest Student Review Platform

40503627917. 4.5

40503627918. 4.7

40503627919. 4.9

40503627920. 5.0

Question Number : 95 Question Id : 4050367637 Question Type : MCQ Option Shuffling : Yes Display Question Number : Yes Is Question Mandatory : No Single Line Question Option : No Option Orientation : Vertical

Correct Marks : 4 Wrong Marks : 1

परिवार के आकार के अनुसार परिवारों की संख्या निम्न सारणी में दी गई है। औसत परिवार आकार क्या है?
(एक दशमलव स्थान तक शुद्ध)

क्रम सं.	परिवार आकार (व्यक्ति)	परिवारों की संख्या
1.	3	300
2.	4	200
3.	5	400
4.	6	400

Options :

40503627917. 4.5

40503627918. 4.7

40503627919. 4.9

40503627920. 5.0



collegedunia.com

India's largest Student Review Platform

Question Number : 95 Question Id : 4050367637 Question Type : MCQ Option Shuffling : Yes Display Question Number : Yes Is Question Mandatory : No Single Line Question Option : No Option Orientation : Vertical

Correct Marks : 4 Wrong Marks : 1

નીચે આપેલા કોષ્ટકમાં પરિવાર ના કદ પ્રમાણે પરિવારોની સંખ્યા આપેલ છે. તો સરેરાશ પરિવાર કદ કેટલું છે? (એક દશાંશ સુધી બંધ (Rounded off) કરેલ છે)

ક્રમ નંબર	પરિવાર કદ (વ્યક્તિઓ)	પરિવારોની સંખ્યા
1.	3	300
2.	4	200
3.	5	400
4.	6	400

Options :

40503627917. 4.5

40503627918. 4.7

40503627919. 4.9

40503627920. 5.0

Question Number : 96 Question Id : 4050367638 Question Type : MCQ Option Shuffling : Yes Display Question Number : Yes Is Question Mandatory : No Single Line Question Option : No Option Orientation : Vertical

Correct Marks : 4 Wrong Marks : 1



collegedunia.com

India's largest Student Review Platform

Read the given passage and answer the question.

The United Nations (UN) has warned that the global consumption of natural resources could triple to 140 billion tons a year by 2050 unless consumer nations take drastic steps. The UN environment panel called on governments to 'decouple' economic growth from the rapid rate of natural resource consumption. It said the world is already running out of some essential materials including oil, copper and gold, which in turn, will need rising volumes of fuel and water. Decoupling involves transition to a low-carbon, resource efficient green economy that stimulates growth in a way to keep humanity's footprint within planetary.

The term 'decoupling' here would entail :

Options :

40503627921. Birth control measures to reduce resource consumption
40503627922. Production of cheap materials
40503627923. Talk less and work more
40503627924. Promoting growth that stresses on reducing the rate of consumption of natural resources



collegedunia.com

India's largest Student Review Platform

Question Number : 96 Question Id : 4050367638 Question Type : MCQ Option Shuffling : Yes Display Question Number : Yes Is Question Mandatory : No Single Line Question Option : No Option Orientation : Vertical

Correct Marks : 4 Wrong Marks : 1

Read the given passage and answer the question.

The United Nations (UN) has warned that the global consumption of natural resources could triple to 140 billion tons a year by 2050 unless consumer nations take drastic steps. The UN environment panel called on governments to 'decouple' economic growth from the rapid rate of natural resource consumption. It said the world is already running out of some essential materials including oil, copper and gold, which in turn, will need rising volumes of fuel and water. Decoupling involves transition to a low-carbon, resource efficient green economy that stimulates growth in a way to keep humanity's footprint within planetary.

The term 'decoupling' here would entail :

Options :

40503627921. Birth control measures to reduce resource consumption

40503627922. Production of cheap materials

40503627923. Talk less and work more

40503627924. Promoting growth that stresses on reducing the rate of consumption of natural resources



collegedunia.com

India's largest Student Review Platform

Question Number : 96 Question Id : 4050367638 Question Type : MCQ Option Shuffling : Yes Display Question Number : Yes Is Question Mandatory : No Single Line Question Option : No Option Orientation : Vertical

Correct Marks : 4 Wrong Marks : 1

Read the given passage and answer the question.

The United Nations (UN) has warned that the global consumption of natural resources could triple to 140 billion tons a year by 2050 unless consumer nations take drastic steps. The UN environment panel called on governments to 'decouple' economic growth from the rapid rate of natural resource consumption. It said the world is already running out of some essential materials including oil, copper and gold, which in turn, will need rising volumes of fuel and water. Decoupling involves transition to a low-carbon, resource efficient green economy that stimulates growth in a way to keep humanity's footprint within planetary.

The term 'decoupling' here would entail :

Options :

- 40503627921. Birth control measures to reduce resource consumption
- 40503627922. Production of cheap materials
- 40503627923. Talk less and work more



collegedunia.com
India's largest Student Review Platform

Promoting growth that stress on
reducing the rate of consumption of
natural resources

40503627924.

**Question Number : 97 Question Id : 4050367639 Question Type : MCQ Option Shuffling : Yes Display Question Number : Yes Is
Question Mandatory : No Single Line Question Option : No Option Orientation : Vertical**

Correct Marks : 4 Wrong Marks : 1

**Read the given passage and answer the
question.**

The United Nations (UN) has warned that the global consumption of natural resources could triple to 140 billion tons a year by 2050 unless consumer nations take drastic steps. The UN environment panel called on governments to 'decouple' economic growth from the rapid rate of natural resource consumption. It said the world is already running out of some essential materials including oil, copper and gold, which in turn, will need rising volumes of fuel and water. Decoupling involves transition to a low-carbon, resource efficient green economy that stimulates growth in a way to keep humanity's footprint within planetary.

Identify the correct statement :

Options :

40503627925. 140 billion tons of natural resources
will be consumed till the end of 2050

40503627926. Green economy refers to an economy
that is based on forest resources



collegedunia.com

India's largest Student Review Platform

40503627927. Green economy refers to an economy that produces at lower carbon footprint and is resource efficient

40503627928. The UN has asked governments to reduce their economic growth

Question Number : 97 Question Id : 4050367639 Question Type : MCQ Option Shuffling : Yes Display Question Number : Yes Is Question Mandatory : No Single Line Question Option : No Option Orientation : Vertical Correct Marks : 4 Wrong Marks : 1

Read the given passage and answer the question.

The United Nations (UN) has warned that the global consumption of natural resources could triple to 140 billion tons a year by 2050 unless consumer nations take drastic steps. The UN environment panel called on governments to 'decouple' economic growth from the rapid rate of natural resource consumption. It said the world is already running out of some essential materials including oil, copper and gold, which in turn, will need rising volumes of fuel and water. Decoupling involves transition to a low-carbon, resource efficient green economy that stimulates growth in a way to keep humanity's footprint within planetary.

Identify the correct statement :

Options :



collegedunia.com
India's largest Student Review Platform

40503627925. 140 billion tons of natural resources will be consumed till the end of 2050

40503627926. Green economy refers to an economy that is based on forest resources

40503627927. Green economy refers to an economy that produces at lower carbon footprint and is resource efficient

40503627928. The UN has asked governments to reduce their economic growth

Question Number : 97 Question Id : 4050367639 Question Type : MCQ Option Shuffling : Yes Display Question Number : Yes Is Question Mandatory : No Single Line Question Option : No Option Orientation : Vertical Correct Marks : 4 Wrong Marks : 1



collegedunia.com

India's largest Student Review Platform

Read the given passage and answer the question.

The United Nations (UN) has warned that the global consumption of natural resources could triple to 140 billion tons a year by 2050 unless consumer nations take drastic steps. The UN environment panel called on governments to 'decouple' economic growth from the rapid rate of natural resource consumption. It said the world is already running out of some essential materials including oil, copper and gold, which in turn, will need rising volumes of fuel and water. Decoupling involves transition to a low-carbon, resource efficient green economy that stimulates growth in a way to keep humanity's footprint within planetary.

Identify the correct statement :

Options :

40503627925. 140 billion tons of natural resources will be consumed till the end of 2050

40503627926. Green economy refers to an economy that is based on forest resources

40503627927. Green economy refers to an economy that produces at lower carbon footprint and is resource efficient

40503627928. The UN has asked governments to reduce their economic growth



collegedunia.com

India's largest Student Review Platform

Question Number : 98 Question Id : 4050367640 Question Type : MCQ Option Shuffling : Yes Display Question Number : Yes Is Question Mandatory : No Single Line Question Option : No Option Orientation : Vertical

Correct Marks : 4 Wrong Marks : 1

Statement : The citizens of Narbhada city are facing water shortage.

Given are the two courses of action available to the Municipal corporation.

- (I) The Municipal Corporation of Narbhada should immediately take action to prevent all water leakages and theft.
- (II) The Municipal Corporation of Narbhada should cut the water supply to its residents by half.

Which of the following options is most appropriate ?

Options :

40503627929. only (I)

40503627930. only (II)

40503627931. both (I) and (II)

40503627932. neither (I) nor (II)

Question Number : 98 Question Id : 4050367640 Question Type : MCQ Option Shuffling : Yes Display Question Number : Yes Is Question Mandatory : No Single Line Question Option : No Option Orientation : Vertical

Correct Marks : 4 Wrong Marks : 1



collegedunia.com

India's largest Student Review Platform

कथन : नर्भदा शहर के लोग पानी की कमी का सामना कर रहे हैं।

नगर निगम के पास दो कार्यवाहियाँ उपलब्ध हैं।

- (I) नर्भदा के नगर निगम को पानी रिसने तथा चोरी को तुरंत रोकने के लिए कार्यवाही करनी चाहिए।
- (II) नर्भदा के नगर निगम को अपने निवासियों की जलापूर्ति आधी कर देनी चाहिए।

निम्न में से कौन सा विकल्प सबसे उचित है?

Options :

40503627929. केवल (I)

40503627930. केवल (II)

40503627931. (I) तथा (II) दोनों

40503627932. न तो (I) न ही (II)

Question Number : 98 Question Id : 4050367640 Question Type : MCQ Option Shuffling : Yes Display Question Number : Yes Is Question Mandatory : No Single Line Question Option : No Option Orientation : Vertical Correct Marks : 4 Wrong Marks : 1



collegedunia.com

India's largest Student Review Platform

વિધાન : નર્મદા શહેર ના નાગરિકો પાણી ની અછતનો સામનો કરે છે.

નીચે નગરપાલિકા પાસે બે ઉપાયો ઉપલબ્ધ છે.

- (I) નર્મદા નગરપાલિકા એ પાણીનું લીકિજ (વ્યય) અને ચોરી અટકાવવા માટે સત્વરે પગલા લેવા.
- (II) નર્મદા નગરપાલિકા એ નિવાસી ને મળતા પાણીનો પૂરવઠાને અડધો કરવો.

નીચે આપેલા વિકલ્પોમાંથી સૌથી ઉચિત કયો છે ?

Options :

40503627929. ફક્ત (I)

40503627930. ફક્ત (II)

40503627931. (I) અને (II) બંને

40503627932. નહીં (I) કે નહીં (II)

Question Number : 99 Question Id : 4050367641 Question Type : MCQ Option Shuffling : Yes Display Question Number : Yes Is Question Mandatory : No Single Line Question Option : No Option Orientation : Vertical Correct Marks : 4 Wrong Marks : 1

In a survey taken for household income in an area, mean annual income of the households came to be Rs 10.0 lakh and the median income was Rs 4.0 lakh per annum. Which of the following statement will explain the difference between mean and median income of the households ?

Options :



collegedunia.com

India's largest Student Review Platform

40503627933. more than 50% of the households
have income around 10.0 lakh

40503627934. more than 50% of the households
have income much higher than
10.0 lakh

40503627935. few households have income much
higher than 10.0 lakh

40503627936. most of the households have income
between 4.0 lakh to 10.0 lakh

**Question Number : 99 Question Id : 4050367641 Question Type : MCQ Option Shuffling : Yes Display Question Number : Yes Is
Question Mandatory : No Single Line Question Option : No Option Orientation : Vertical
Correct Marks : 4 Wrong Marks : 1**

एक क्षेत्र में परिवारों की आय के लिए किए गए एक सर्वेक्षण में परिवारों की वार्षिक आय का माध्य रु. 10.0 लाख आया तथा आय की माध्यिका 4.0 लाख प्रति वर्ष थी। निम्न कथनों में से कौन सा परिवारों की आय के माध्य तथा माध्यिका का अन्तर स्पष्ट करता है?

Options :

40503627933. 50% से अधिक परिवारों की आय लगभग
10.0 लाख है।

40503627934. 50% से अधिक परिवारों की आय 10.0 लाख
से बहुत अधिक है।



collegedunia.com

India's largest Student Review Platform

40503627935. कुछ ही परिवारों की आय 10.0 लाख से बहुत अधिक है।

40503627936. अधिकतर परिवारों की आय 4.0 लाख तथा 10.0 लाख के बीच है।

Question Number : 99 Question Id : 4050367641 Question Type : MCQ Option Shuffling : Yes Display Question Number : Yes Is Question Mandatory : No Single Line Question Option : No Option Orientation : Vertical Correct Marks : 4 Wrong Marks : 1

એક વિસ્તારમાં ઘરગથ્થું આવક માટે નો સર્વે હાથ ધરવામાં આવ્યો. ઘરગથ્થુ ની મધ્યક (mean) વાર્ષિક આવક રૂપિયા 10.0 લાખ મળી આવી અને જ્યારે મધ્યસ્થની (median) વાર્ષિક આવક રૂપિયા 4.0 લાખ મળી આવી. નીચે આપેલા વિધાનો માંથી કયું વિધાન ઘરગથ્થુ મધ્યક અને મધ્યસ્થ આવક ને જુદું પાડવાની સમજૂતી આપે છે?

Options :

40503627933. 50% થી વધારે ઘરગથ્થુ ઓની આવક 10.0 લાખ ની આસપાસ છે.

40503627934. 50% થી વધારે ઘરગથ્થુ ઓની આવક 10.0 લાખ કરતા ઘણી વધારે છે.

40503627935. બહુ જ થોડા ઘરગથ્થુ ઓની આવક 10.0 લાખ કરતા ઘણી વધારે છે.



collegedunia.com
India's largest Student Review Platform

મોટા ભાગના ઘરગથ્થુઓ આવક 4.0 લાખ થી

40503627936. 10.0 લાખની વચ્ચે ધરાવે છે.

Question Number : 100 Question Id : 4050367642 Question Type : MCQ Option Shuffling : Yes Display Question Number : Yes Is Question Mandatory : No Single Line Question Option : No Option Orientation : Vertical Correct Marks : 4 Wrong Marks : 1

Statement I :

Sustainable development means development that takes place without causing damage to the environment.

Statement II :

Sustainable development means development that meets the needs of the present without compromising the needs of the future generation.

Which of these is correct ?

Options :

40503627937. Statement (I) only

40503627938. Statement (II) only

40503627939. Both statements (I) and (II)

40503627940. Neither statement (I) nor (II)



collegedunia.com

Question Number : 100 Question Id : 4050367642 Question Type : MCQ Option Shuffling : Yes Display Question Number : Yes Is Question Mandatory : No Single Line Question Option : No Option Orientation : Vertical Correct Marks : 4 Wrong Marks : 1

कथन I :

सतत विकास (Sustainable development) का अर्थ वह विकास है जो पर्यावरण को नुकसान पहुँचाये बिना होता है।

कथन II :

सतत विकास का अर्थ वह विकास है जो भविष्य की पीढ़ी की आवश्यकताओं को संकट में डाले बिना वर्तमान की आवश्यकताओं को पूरा करता है।

इनमें से कौन सा सही है?

Options :

40503627937. केवल कथन (I)

40503627938. केवल कथन (II)

40503627939. कथन (I) तथा (II) दोनों

40503627940. न तो कथन (I) न ही कथन (II)

Question Number : 100 Question Id : 4050367642 Question Type : MCQ Option Shuffling : Yes Display Question Number : Yes Is Question Mandatory : No Single Line Question Option : No Option Orientation : Vertical Correct Marks : 4 Wrong Marks : 1



collegedunia.com
India's largest Student Review Platform

વિધાન I :

ટકાઉ વિકાસનો અર્થ એ છે કે, વિકાસ કે જે પર્યાવરણને નુકશાન કરતો નથી.

વિધાન II :

ટકાઉ વિકાસનો અર્થ એ છે કે, વિકાસ કે જે ભવિષ્યની પેઢીની જરૂરિયાતો ની સાથે સમાધાન કર્યા વગર વર્તમાનની જરૂરિયાતો ને સંતોષે.

નીચેનામાંથી કયું સાચું છે?

Options :

40503627937. વિધાન (I) ફક્ત

40503627938. વિધાન (II) ફક્ત

40503627939. બંને વિધાનો (I) અને (II)

40503627940. નહીં વિધાન (I) કે નહીં (II)



collegedunia.com

India's largest Student Review Platform