

CHEMISTRY
CLASS-XII

**LIST OF MEMBERS WHO REVIEWED AND REVISED SUPPORT
MATERIAL OF CHEMISTRY AS PER LATEST SYLLABUS
PRESCRIBED BY CBSE FOR CLASS XII**

S. No.	Name	Designation
1.	Roop Narain Chauhan Group Leader (9868373636)	Vice Principal S. V. Surhera, New Delhi-73
2.	Mukesh Kumar Kaushik (Member)	Lecturer R. P. V. V., Narela, Delhi-40
3.	Pradeep Kumar Mundra (Member)	Lecturer R. P. V. V., Rajniwas Marg, Delhi-54
4.	Dr. Anil Kumar (Member)	Lecturer R. P. V. V., Thyagrajnagar, Delhi-03
5.	Harpreet Singh (Member)	Lecturer R. P. V. V., Kishanganj, Delhi-07
6.	Praveen Kumar (Member)	Lecturer R. P. V. V., Dwarka, New Delhi-73
7.	Dr. Arjun Singh (Member)	Lecturer SBM, SSS, Shivaji Marg, Delhi-15
8.	Punita Maindiratta (Member)	Lecturer SKV, D-Block, Mangolpuri, Delhi-83
9.	Manjeet Singh Hooda (Member)	Lecturer R. P. V. V., Rohini, Sector-11, Delhi-85
10.	R. N. Singh (Member)	Lecturer GSBV, Rouse Avenue, Delhi-02

Chemistry (Code No. 043) Question Paper Design

Class XII (2016-17)

Time : 3 Hours

Max. Marks : 70

Sr. No.	Typology of Questions	Very Short Answer (VSA) 1 Mark	Short Answer I (SA-I) 2 Marks	Short Answer II (SA-II) 3 Marks	Value based question 4 Marks	Long Answer (LA) 5 marks	Total Marks	% Weigh- tage
1.	Remembering (Knowledge based Simple recall questions, to know specific facts, terms, concepts, principles, or theories, identify, define, or recite information).	2	1	1	-	-	7	10%
2.	Understanding. (Comprehension-to be familiar with meaning and to understand conceptually, interpret, compare, contrast, explain, paraphrase, or interpret information)	-	2	4	-	1	21	30%
3.	Application (Use abstract information in concrete situations, to apply knowledge to new situations; Use given content to interpret a situation, provide an example, or solve a problem)	-	2	4	-	1	21	30%
4.	High order Thinking Skills (Analysis & Synthesis Classify, compare, contrast or differentiate between different pieces of information, Organise and / or integrate unique places of information from a variety of sources)	2	-	1	-	1	10	14%
5.	Inferential and Evaluation and Multi-Disciplinary (Appraise, judge, and /or justify the value or worth of a decision or outcome, or to predict outcomes based on values)	1	-	2	1	-	11	16%
Total		5×1=5	5×2=10	12×3=36	1×4=4	3×5=15	70(26)	100%

CONTENTS

Unit		Page No.
1.	The Solid State	7-18
2.	Solutions	19-33
3.	Electrochemistry concepts	34-55
4.	Chemical Kinetics	56-78
5.	Surface Chemistry	79-92
6.	General Principles and Processes of Isolation of Elements	93-103
7.	p-Block Elements	104-137
8.	The <i>d</i> - and <i>f</i> -Block Elements	138-152
9.	Co-ordination Compounds	153-167
10.	Haloalkanes and Haloarenes	168-180
11.	Alcohols, Phenols and Ethers	181-192
12.	Aldehydes, Ketones and Carboxylic Acids	193-212
13.	Amines	213-227
14.	Biomolecules	228-249
15.	Polymers	250-263
16.	Chemistry in Everyday Life	264-280
●	Solved Practice Papers with Marking Schemes and Two Unsolved Sample Papers	281-330

CLASS XII (2016-17) (THEORY)

Total Periods (Theory 160 + Practical 60)

Time : 3 Hours

70 Marks

Unit No.	Title	No. of Periods	Marks
Unit I	Solid State	10	
Unit II	Solutions	10	
Unit III	Electrochemistry	12	23
Unit IV	Chemical Kinetics	10	
Unit V	Surface Chemistry	08	
Unit VI	General Principles and Processes of Isolation of Elements	08	
Unit VII	p-Block Elements	12	
Unit VIII	d- and f- Block Elements	12	19
Unit IX	Coordination Compounds	12	
Unit X	Haloalkanes and Haloarenes	10	
Unit XI	Alcohols, Phenols and Ethers	10	
Unit XII	Aldehydes, Ketones and Carboxylic Acids	10	28
Unit XIII	Organic Compounds Containing Nitrogen	10	
Unit XIV	Biomolecules	12	
Unit XV	Polymers	08	
Unit XVI	Chemistry in Everyday Life	06	
Total		160	70

QUESTION-WISE BREAK UP

Type of Question	Mark per Question	Total No. of Question	Total Marks
VSA	1	5	05
SA-I	2	5	10
SA-II	3	12	36
VBQ	4	1	04
LA	5	3	15
Total		26	70

1. Internal Choice : There is no overall choice in the paper. However, there is an internal choice in one question of 2 marks weightage, one question of 3 marks weightage and all the three questions of 5 marks weightage.

2. The above template is only a sample. Suitable internal variations may be made for generating similar templates keeping the overall weightage to different form of questions and typology of questions same.

UNIT I

THE SOLID STATE

Points to Remember

1. HCP and CCP have equal efficiency *i.e.*, 74% of space is occupied and coordination number is 12. CCP arrangement has FCC lattice.
2. Coordination number is the number of nearest neighbouring points surrounding a particular lattice point (point may be atom, ions or molecules).
3. Packing efficiency in simple cubic unit cell is 52.4%, in bcc arrangement is 68% and in fcc is 74%.
4. Unoccupied spaces in solids are called interstitial voids or interstitial sites.
5. Two types of interstitial voids are :
 - (i) tetrahedral void
 - (ii) octahedral void
 - * No. of tetrahedral voids = $2 \times N$ (where N is number of closed packed particles).
 - * No. of octahedral voids = N.
6. Valency defect lowers the density of a crystal.
7. Interstitial defect increases the density of a crystal.
8. Point defects in the ionic crystal may be classified as :
 - (i) Stoichiometric defect also known as intrinsic or thermodynamic defect. Ratio of cations and anions is the same in defective crystal as in ideal crystal.
 - (ii) In non-stoichiometric defect ratio of cations to anions is the difference in defective crystal from the ideal crystal.
 - (iii) Impurity defect (due to presence of some other ions at the lattice sites).
9. Schottky defect arises due to missing of equal number of cations and anions from lattice sites in the crystalline solid of the type A^+B^- and it lowers and density of alkali metal halides, *e.g.*, NaCl, KCl etc.
10. Frenkel defect is the combination of vacancy and interstitial defects. Cations leave their actual lattice sites and occupy the interstitial space in the solid. Density remains the same in Frenkel defect.

^+AgBr is the compound which shows both Schottky defect as well as Frenkel defect.

11. Non-stoichiometric defect
 - (i) Metal excess defect due to anion vacancies.
 - (ii) Metal excess defect due to presence of extra cations.
 - (iii) Metal deficiency due to absence of cations.
12. **F-Center** : In metal excess defect, electrons are trapped in the anion vacancies which act as colour centres, *e.g.*, NaCl gives yellow colour when heated in sodium vapour.
13. Doping is the process of increasing the conductivity of intrinsic semiconductors by adding an appropriate amount of suitable impurity in Si or Ge.
 - * **n-type semiconductors** : Silicon or Germanium (group 14) doped with electron rich impurity (group 15 element like P or As). Here, conductivity is due to the extra electrons or delocalized electrons.
 - * **p-type semiconductors** : Silicon or Germanium (group 14) doped with group 13 elements like B or Al. Here, conductivity is due to positively charged electron holes.
 - * 13-15 group compounds, *e.g.*, InSb, AlP, GaAs.
 - * 12-16 group compounds, *e.g.*, ZnS, CdS, CdSe, HgTe.
 - * These compounds have average valence of four and are used in semiconductor devices.

14. Magnetic Properties

- * **Ferromagnetic substances** : A few substances like iron, cobalt, nickel and CrO_2 etc. are attracted very strongly by a magnetic field. Such substances are called ferromagnetic substances.

All molecular domains are arranged permanently in the same direction under influence of magnetic field.



- * **Antiferromagnetism** : Substances like MnO showing antiferromagnetism have domain structure similar to ferromagnetism substances, but their domains are oppositely oriented and cancel out each other's magnetic moment and so cannot be attracted towards magnet.
- * **Ferrimagnetism** : When the magnetic moments of the domains in the substances are aligned in parallel and antiparallel directions in unequal number.

These are weakly attracted by magnetic field as compared to ferromagnetic substances. For example, Fe_3O_4 , MgF_2O_4 etc.

* Paramagnetic substances are weakly attracted by a magnetic field. Examples are O_2 , Cu^{2+} , Fe^{3+} , Cr^{3+} which are paramagnetic due to the presence of unpaired one or more electrons. They lose their magnetism in the absence of magnetic field.

* Diamagnetic substances are weakly repelled by a magnetic field. Examples are H_2O , NaCl , C_6H_6 because they have all the electrons paired.

1. Calculation of number of particles/atoms/ions in a unit cell :

Type of unit cell	Number of particles per unit cell	Relationship between edge length (a) and radius (r) of atom/ion
Simple cubic (SC)	1	$a = 2r$
Body centred cubic (BCC)	2	$a = \frac{4}{\sqrt{3}}r$
Face centred cubic (FCC)	4	$a = 2\sqrt{2}r$

2. Density of unit cell :

$$d = \frac{ZM}{a^3 N_A}$$

where Z is rank of unit cell (number of atoms per unit cell), M is molar mass/atomic mass, a is edge length of the cube, a^3 is volume of cubic unit cell and N_A is Avogadro constant.

3. Packing efficiency, PE = $\frac{Z \times \frac{4}{3} \pi r^3}{a^3} \times 100$

Here, M is molar mass, r is radius of atom, d is density and N_A is Avogadro's constant ($6.022 \times 10^{23} \text{ mol}^{-1}$).

Rank of unit cell can be computed by packing efficiency value :

Type of unit cell	Packing efficiency	Rank of unit cell (Z)
SC	52.4%	1
BCC	68%	2
FCC	74%	4

VERY SHORT ANSWER TYPE QUESTIONS (1 Mark)

Q. 1. What do you mean by paramagnetic substance ?

Ans. Weakly attracted by magnetic field and these substances are made of atoms or ions with unpaired electrons.

Q. 2. Which substance exhibit both Schottky and Frenkel defects ?

Ans. AgBr.

Q. 3. Name a salt which is added to AgCl so as to produce cationic vacancies.

Ans. CdCl₂

Q. 4. Why Frenkel defects not found in pure alkali metal halides ?

Ans. Due to larger size of alkali metal ion, these cannot shift in interstitial space.

Q. 5. What is the use of amorphous silica ?

Ans. Used in photovoltaic cell.

Q. 6. Analysis shows that a metal oxide has the empirical formula $M_{0.98}O_{1.00}$. Calculate the percentage of M^{2+} and M^{3+} ions in the crystal.

Ans. Let the M^{2+} ion in the crystal be x and $M^{3+} = 0.98 - x$

Since, total charge on the compound must be zero,

$$\text{So, } 2x + 3(0.98 - x) - z = 0$$

$$\text{Or } x = 0.94$$

$$\% \text{ of } M^{2+} = \frac{0.94}{0.98} \times 100 = 97.9\%$$

$$\% \text{ of } M^{3+} = 100 - 97.9 = 2.1\%$$

Q. 7. What is the co-ordination number of cation and anion in Caesium chloride (bcc arrangement) ?

Ans. 8 and 8.

Q. 8. What is F-centre ?

Ans. It is the anion vacancy occupied by free electron in metal excess defect.

Q. 9. What makes alkali metal halides sometimes coloured, which are otherwise colourless ?

Ans. Due to presence of F-centre.

Q.10. How does silica differ from quartz ?

Ans. Silica is amorphous form, while quartz is crystalline form of SiO₂.

Q.11. Which point defect lowers the density of a crystal ?

Ans. Schottky defect/Vacancy defect.

Q.12. Why glass is called super cooled liquids ?

Ans. *Hint* : Its molecules move under gravity.

Q.13. Some of the very old glass objects appear slightly milky instead of being transparent. Why ?

Ans. Realignment of molecules takes place due to movement because of constant heating and cooling.

Q.14. What is anisotropy ?

Ans. Physical properties show different values when measured along different axis in crystalline solids.

Q.15. What is the coordination number of atoms in :

(a) fcc structure (b) bcc structure ?

Ans. (a) 12 (b) 8

Q.16. How many lattice points are there in one unit cell of :

(a) fcc

(b) bcc

(c) simple cubic arrangement ?

Ans. (a) 14 (b) 9 (c) 8

Q.17. What are the co-ordination numbers of octahedral voids and tetrahedral voids ?

Ans. 6 and 4 respectively.

Q.18. Why common salt is sometimes yellow instead of being pure white ?

Ans. Due to the presence of electrons in some lattice sites in place of anions these sites act as F-centres. These electrons when excited impart colour to the crystal.

Q.19. A compound is formed by two elements X and Y. The element Y forms ccp arrangement and atoms of X occupy octahedral voids. What is the formula of the compound ?

Ans. No. of Y (ccp) = 4

No. of X (octahedral void) = 4

X : Y = 4 : 4

XY

SA-(I) Type Question (2 Marks)

Q.20. Define F-centres and how it is formed in lattice of crystal ?

Q.21. What type of stoichiometric defect is shown by

- (a) ZnS
- (b) AgBr

Q.22. What are the differences between Frenkel and Schottky defect ?

Q.23. Define the following terms with suitable examples :

- (a) Ferromagnetism
- (b) Paramagnetism
- (c) Ferrimagnetism
- (d) 12-16 and 13-15 group compounds

Q.24. In terms of band theory, what is the difference :

- (a) between conductor and an insulator ?
- (b) between a conductor and a semi-conductor ?

Q.25. Explain how electrical neutrality is maintained in compounds showing Frenkel and Schottky defect.

Ans. In compound showing Frenkel defect, ions just get displaced within the lattice, while in compounds showing Schottky defect, equal number of anions and cations are removed from the lattice. Thus, electrical neutrality is maintained in both cases.

Q.26. Calculate the number of atoms in a cubic unit cell having one atom on each corner and two atoms on each body diagonal.

Ans. 8 corner \times 1/8 atom per unit cell = 1 atom

There are four body diagonals in a cubic unit cell and each has two body centre atoms.

So, $4 \times 2 = 8$ atoms therefore, total number of atoms per unit cell = $1 + 8 = 9$.

Q.27. Gold crystallizes in an FCC unit cell. What is the edge length of unit cell ($r = 0.144$ nm) ?

Ans.

$$\begin{aligned} r &= 0.144 \text{ nm} \\ a &= 2\sqrt{2}r \\ &= 2 \times 1.414 \times 0.144 \text{ nm} \\ &= 0.407 \text{ nm} \end{aligned}$$

Q.28. Classify each of the following as either a p-type or n-type semi-conductor :

(a) Ge doped with In

(b) B doped with Si

Ans. Hint : (a) Ge is group 14 element and In is group 13 element. Therefore, an electron deficit hole is created. Thus semi-conductor is p-type.

(b) Since B is group 13 element and Si is group 14 element, there will be a free electron, thus, it is n-type semi-conductor.

Q.29. In terms of band theory, what is the difference between a conductor, an insulator and a semi-conductor ?

Ans. The energy gap between the valence band and conduction band in an insulator is very large while in a conductor, the energy gap is very small or there is overlapping between valence band and conduction band.

Q.30. CaCl_2 will introduce Schottky defect if added to AgCl crystal. Explain.

Ans. Two Ag^+ ions will be replaced by one Ca^{2+} ion to maintain electrical neutrality. Thus, a hole is created at the lattice site for every Ca^{2+} ion introduced.

Q.31. The electrical conductivity of a metal decreases with rise in temperature while that of a semi-conductor increases. Explain.

Ans. In metals with increase of temperature, the kernels start vibrating at faster rate and thus offer resistance to the flow of electrons. Hence, conductivity decreases. In case of semi-conductors, with increase of temperature, more electrons can shift from valence band to conduction band. Hence conductivity increases.

Q.32. What type of substances would make better permanent magnets – ferromagnetic or ferro-magnetic ? Why ?

Ans. Ferromagnetic substances make better permanent magnets. This is because the metal ions of a ferromagnetic substance are grouped into small regions called domains. Each domain acts as tiny magnet and get oriented in the direction of magnetic field in which it is placed. This persists even in the absence of magnetic field.

Q.33. In a crystalline solid, the atoms A and B are arranged as follows :

(a) Atoms A are arranged in ccp array.

(b) Atoms B occupy all the octahedral voids and half of the tetrahedral voids.

What is the formula of the compound ?

Ans. No. of A (ccp) = 4

$$\text{No. of B} = \text{octahedral voids} + \frac{\text{Tetrahedral}}{2}$$

$$= 4 + \frac{8}{2}$$

$$= 8$$

A : B therefore, formula of the compound is AB_2

4 : 8

1 : 2

AB_2

Q.34. In compound atoms of element Y forms ccp lattice and those of element X occupy 2/3rd of tetrahedral voids. What is the formula of the compound ?

Ans. No. of Y atoms per unit cell in ccp lattice = 4

 No. of tetrahedral voids = $2 \times 4 = 8$

 No. of tetrahedral voids occupied by X = $\frac{2}{3} \times 8 = \frac{16}{3}$

Therefore, Formula of the compound = $X_{\frac{16}{3}}Y_4$

$$= X_{16}Y_{12}$$

$$= X_4Y_3$$

Q.35. How many lattice points are there in one unit cell of the following lattices :

(a) FCC (b) BCC (c) SCC

Q.36. A cubic solid is made of two elements X and Y. Atom Y are at the corners of the cube and X at the body centres. What is the formula of the compound ?

Ans. [Hint : XY]

Q.37. Silver forms ccp lattice and X-ray studies of its crystal show that the edge length of its unit cell is 408.6 pm. Calculate the density of silver (Atomic wt. = 107.9u).

Ans. [Hint : PQ, 8 and 9]

Q.38. A cubic solid is made up of two elements P and Q. Atoms of the Q are present at the corners of the cube and atoms of P at the body centre. What is the formula of the compound ? What are the co-ordination number of P and Q ?

Ans. [Hint : PQ, 8]

Q.39. What happens when :

(a) CsCl crystal is heated. (Hint : Changes to NaCl type crystal)

(b) Pressure is applied on NaCl crystal. (Hint : Changes to CsCl type crystal)

SA-(II) Question (3 marks)

Q.40. The density of chromium is 7.2 g cm^{-3} . If the unit cell is a cubic with length of 289 pm, determine the type of unit cell. (Atomic mass of Cr = 52 u and $N_A = 6.022 \times 10^{23} \text{ atoms mol}^{-1}$).

Ans. $d = \frac{ZM}{a^3 \times N_A}$

Here, $Z = ?$, $a = 289 \text{ pm} = 289 \times 10^{-10}$, $M = 52 \text{ g mol}^{-1}$, $d = 7.2 \text{ g cm}^{-3}$

So,
$$Z = \frac{d \times a^3 \times N_A}{M}$$

$$Z = \frac{7.2 \text{ g cm}^{-3} \times (289 \times 10^{-10} \text{ cm})^3 \times 6.022 \times 10^{23} \text{ atom mol}^{-1}}{52 \text{ g mol}^{-1}} = 2.01 ; 2$$

Hence type of unit cell in BCC.

- Q.41.** An element crystallizes in FCC structure; 200 g of this element has 4.12×10^{24} atoms. If the density of A is 7.2 g cm^{-3} , calculate the edge length of unit cell.
- Q.42.** Niobium crystallizes in bcc structure. If its density is 8.55 cm^{-3} , calculate its atomic radius. (Atomic mass of Niobium = 92.9 u , $N_A = 6.022 \times 10^{23} \text{ atoms mol}^{-1}$)
- Q.43.** Non-stoichiometric cuprous oxide can be prepared in the laboratory. In this oxide, copper to oxygen ratio is slightly less than 2 : 1. Can you account for the fact that the substance is a p-type semiconductor ?
- Q.44.** The unit cell of an element of atomic mass 50 u has edge length 290 pm. Calculate its density. The element has bcc structure. ($N_A = 6.022 \times 10^{23} \text{ atoms mol}^{-1}$)
- Q.45.** Calculate the density of silver which crystallizes in face centred form. The distance between nearest metal atoms is 287 pm. ($\text{Ag} = 107.87 \text{ g mol}^{-1}$, $N_A = 6.022 \times 10^{23} \text{ atoms mol}^{-1}$)
- Q.46.** What is the distance between Na^+ and Cl^- ions in NaCl crystal if its density is 2.165 g cm^{-3} . NaCl crystallizes in FCC lattice.
- Q.47.** Analysis shows that Nickel oxide has $\text{Ni}_{0.98}\text{O}_{1.00}$. What fractions of nickel exist as Ni^{2+} ions and Ni^{3+} ions ?
- Q.48.** Find the type of lattice for cube having edge length of 400 pm. Atomic weight = 60 g mol^{-1} and density = 6.25 g/cc .
- Q.49.** Aluminium crystallizes in cubic closed pack structure. Its metallic radius is 125 pm.
- What is the length of the side of the unit cell ?
 - How many unit cell are there in 100 cm^3 of Aluminium ?
- Q.50.** Classify the following as either p-type or n-type semiconductors :
- Ge doped with In
 - B doped with Si
- Q.51.** Zinc oxide is white but it turns yellow on heating. Explain.

LONG ANSWER TYPE QUESTIONS (5 Marks)

- Q.52.** A metal has cubic lattice. It is face centered cubic lattice. Edge length of lattice cell is 2 \AA . The density of metal is 2.4 g cm^{-3} . How many unit cells are present in 200 g of metal ?
- Q.53.** A metal crystallizes as face centered cubic lattice with edge length of 450 pm. Molar mass of metal is 50 g mol^{-1} . What is the density of metal ?
- Q.54.** A compound forms hexagonal close packed structure. What is the total number of voids in 0.5 mol of it ? How many of these are tetrahedral voids ?
- Q.55.** Copper crystallizes into FCC lattice with edge length $3.61 \times 10^{-8} \text{ cm}$. Show that calculated density is in arrangement with measured value of 8.92 g/cc .
- Q.56.** Niobium crystallizes in bcc structure with density 8.55 g/cc . Calculate atomic radius using atomic mass *i.e.*, $93 u$.
- Q.57.** The compound CuCl has FCC structure like ZnS. Its density is 3.4 g cm^{-3} . What is the length of the edge of unit cell ?

$$\text{Hint : } d = \frac{ZM}{a^3 \times N_A}$$

$$a^3 = \frac{4 \times 99}{3.4 \times 6.022 \times 10^{23}}$$

$$a^3 = 193.4 \times 10^{-24} \text{ cm}^3$$

$$a = 5.78 \times 10^{-8} \text{ cm}$$

- Q.58.** If NaCl is doped with $10^{-3} \text{ mol\% SrCl}_2$. What is the concentration of cation valancies ?
- Q.59.** If the radius of the octahedral void is r and the radius of the atom in the close packing is R , derive relationship between r and R .
- Q.60.** The edge length of the unit cell of metal having molecular weight 75 g/mol is A° which crystallizes into cubic lattice. If the density is 2 g/cm^3 , then find the radius of metal atom. ($N_A = 6.022 \times 10^{23} \text{ mol}^{-1}$)
- Q.61.** The density of KBr is 2.75 g cm^{-3} . The length of edge of the unit cell is 654 pm . Predict the type of cubic lattice to which unit cell of KBr belongs. ($N_A = 6.022 \times 10^{23} \text{ mol}^{-1}$, Atomic mass of K = 39 g mol^{-1} , Br = 80 g mol^{-1})

Hint : Calculate the value of $z = 4$ so it has fcc lattice.

- Q.62.** CsCl has bcc arrangement and its unit cell edge length is 400 pm . Calculate the interionic distance of CsCl.

Ans. 34604 pm

Q.63. The radius of an iron atom is 1.42 Å. It has rock salt structure. Calculate the density of unit cell.

Ans. 5.74 g cm⁻³

Q.64. What is the distance between Na⁺ and Cl⁻ in a NaCl crystal if its density is 2.165 g cm⁻³? NaCl crystallizes in fcc lattice.

Ans. 281 pm

Q.65. Copper crystallizes with fcc unit cell. If the radius of copper atom is 127.8 pm, calculate the density of copper metal. Atomic mass of Cu = 63.55u, $N_A = 6.022 \times 10^{23}$.

Ans. $a = 2\sqrt{2}r$, $a^3 = 4.723 \times 10^{-23}$, $d = 8.95 \text{ g cm}^{-3}$

Q.66. The density of lead is 11.35 g/cm³ and the metal crystallizes with fcc unit cell. Estimate the radius of lead atom. (Atomic mass of Pb = 207 g/mol, $N_A = 6.02 \times 10^{23}$)

Ans. 174.95 pm

Q.67. Explain the following with suitable examples :

- Ferromagnetic substances
- 12-16 group compounds
- Paramagnetism
- Impurity defects
- Diamagnetism

Q.68. The well-known mineral fluonite is chemically calcium fluoride. In one unit of this mineral, there are 4Ca²⁺ and 4F⁻ ions arranged in fcc lattice. The F⁻ ions fill all the tetrahedral void in the fcc lattice. The edge of the unit cell is 5.46×10^{-8} cm. The density of the solid is 3.18 g/cm³. Calculate Avogadro's number. (Molar mass of CaF₂ = 78.08 g/mol)

Ans. $6.03 \times 10^{23} \text{ mol}^{-1}$

Q.69. Metallic magnetism has a hexagonal close-packed structure and its density is 1.74 g/cm³. Assuming magnetism atoms to be spherical, calculate the radius of magnetism atom. (Mg = 24.3 amu)

Ans. $1.6 \times 10^{-8} \text{ cm}$

VALUE BASED QUESTIONS (4 Marks)

Q.70. Radha suggested that the conductivity of the semiconductors can be increased by heating. Her friend Mira advised her to dope the semiconductor with either group 13 or group 15 elements to increase the conductivity.

- Explain the cause of increase in conductivity by doping.

- (b) Which type of semiconductor is formed if it is doped with group 13 or group 15 elements ?
- (c) What are intrinsic semiconductors ?
- (d) What values are associated with the suggestion of Mira ?

Q.71. Students of class XII Chemistry wanted to prepare magnets. They have substances like iron, cobalt, nickel, CrO_2 and MnO . Kapil tried best to prepare the magnets from MnO but attempt failed. Veena suggested that except MnO , all the above mentioned substances can be used to prepare magnets.

- (a) Why did Kapil fail to prepare magnet from MnO ?
- (b) What values are associated with the suggestion of Veena ?
- (c) Define antiferromagnetism.
- (d) How can a ferromagnetic substance be made a permanent magnet ?

Q.72. Vinay and Manish are provided with 50 oranges each with a tray. They are asked to arrange them in an ordered manner within 5 minutes. Vinay successfully arranged the oranges with minimum empty space but Manish does not.

- (a) What type of crystal packing had Vinay attempted ?
- (b) What is the % empty space that remains in such type of arrangement of oranges ?
- (c) Name the values associated with the Vinay's attempt for arranging oranges.
- (d) How many tetrahedral and octahedral voids are formed in the packing of 50 oranges ?



UNIT 2

SOLUTIONS

Points to Remember

1. The component that is having more number of moles is known as solvent. Solvent determines the physical state of the solution. Water is an universal solvent.
2. Mole fraction (X) is a unitless quantity.
3. Molality (m) and mole fraction are temperature independent quantities whereas molarity decreases with increase in temperature.
4. As the temperature increases Henry's law constant, K_H increases so the lower is the solubility of the gas in the liquid.
5. 11.7% w/w Helium is added to air used by scuba divers due to its low solubility in the blood.
6. Raoult's law becomes a special case of Henry's law in which K_H becomes equal to P_A^0 , *i.e.*, vapour pressure of pure solvent.
7. Azeotropes having the same composition in liquid and vapour phase and boil at a constant temperature and therefore can't be distilled.
8. Azeotropes arise due to very large deviation from Raoult's law. Maximum boiling azeotropes form when solutions exhibit negative deviation from Raoult's law whereas minimum boiling azeotropes form when solutions exhibit positive deviation from Raoult's law.
9. Relative lowering in vapour pressure is a colligative property but lowering in vapour pressure is not.
10. Van't Hoff factor (i) is the ratio of the observed value of the colligative property in solution to the theoretically calculated value of the colligative property.
 - (a) A non-volatile solute undergoes dissociation, then $i > 1$.
 - (b) A non-volatile solute undergoes association, then $i < 1$.

Some Important Formulae

1. Mole fraction (X)

If the number of moles of A and B are n_A and n_B respectively, the mole fractions of A and B will be

$$X_A = \frac{n_A}{n_A + n_B} \quad \text{and} \quad X_B = \frac{n_B}{n_A + n_B}$$

$$X_A + X_B = 1$$

2. **Molarity (M)** = $\frac{\text{Moles of solute}}{\text{Volume of solution in litres}} \text{ mol L}^{-1}$

3. **Molality (m)** = $\frac{\text{Moles of solute}}{\text{Mass of solvent in kilograms}} \text{ mol kg}^{-1}$

4. Parts per million (ppm)

$$= \frac{\text{Number of parts of the compound}}{\text{Total number of parts of all components of the solution}} \times 10^6$$

5. Raoult's law for a solution of volatile solute in volatile solvent :

$$p_A = p_A^0 X_A$$

$$p_B = p_B^0 X_B$$

Where p_A and p_B are partial vapour pressures of component 'A' and component 'B' respectively in solution. p_A^0 and p_B^0 are vapour pressures of pure components 'A' and 'B' respectively.

6. Raoult's law for a solution of non-volatile solute and volatile solvent :

$$\frac{p_A^0 - p_A}{p_A^0} = iX_B ; \quad i = \frac{n_B}{n_A} = i \frac{W_B \times M_A}{M_B \times W_A} \quad (\text{for dilute solutions})$$

Where X_B is mole fraction of solute, i is van't Hoff factor and $\frac{p_A^0 - p_A}{p_A^0}$ is relative lowering of vapour pressure.

7. Elevation in boiling point (ΔT_b) :

$$\Delta T_b = i \cdot K_b \cdot m$$

Where $\Delta T_b = T_b - T_b^0$

K_b = molal boiling point elevation constant

m = molality of solution

T_b = Boiling point of solution

T_b^0 = Boiling point of solvent

8. Depression in freezing point (ΔT_f) :

$$\Delta T_f = i \cdot K_f \cdot m$$

Where $\Delta T_f = T_f^0 - T_f$

K_f = molal freezing point depression constant

m = molality of solution

T_f^0 = Freezing point of solvent

T_f = Freezing point of solution

9. Osmotic pressure (π) of a solution :

$$\pi V = i nRT \quad \text{or} \quad \pi = i CRT$$

where π = osmotic pressure in bar or atm

V = volume in litres

i = van't Hoff factor

C = molar concentration in moles per litres

n = number of moles of solute

T = Temperature on Kelvin scale

$R = 0.083 \text{ L bar mol}^{-1} \text{ K}^{-1}$

$R = 0.0821 \text{ L atm mol}^{-1} \text{ K}^{-1}$

10. Van't Hoff factor (i)

$$i = \frac{\text{Number of particles in solution after association or dissociation}}{\text{Number of particles actually dissolved in solution}}$$

$$i = \frac{\text{Observed colligative property}}{\text{Theoretically calculated colligative property}}$$

$$i = \frac{\text{Normal molar mass}}{\text{Abnormal molar mass}}$$

$i > 1$ For dissociation of solute

$i < 1$ For association of solute

$i = 1$ For ideal solution undergoing no association or dissociation

11. Relationship between relative lowering in vapour pressure elevation in b.p.

$$\frac{\Delta p}{p_A^0} = i \frac{\Delta T_b}{K_b} M_A \times 1000$$

Here, Δp is lowering in vapour pressure, p_A^0 is vapour pressure of pure solvent, i is van't Hoff, ΔT_b is elevation in boiling point, K_b is molal elevation constant and M_A is molar mass of solvent.

VERY SHORT ANSWER TYPE QUESTIONS (1 Mark)**Q. 1. What is Van't Hoff factor ?**

Ans. It is the ratio of normal molecular mass to observed molecular mass. It is denoted as i .

i = normal molecular mass/observed molecular mass

= no. of particles after association or dissociation/no. of particles before

Q. 2. What is the Van't Hoff factor in $K_4[Fe(CN)_6]$ and $BaCl_2$?

Ans. 5 and 3

Q. 3. Why the molecular mass becomes abnormal ?

Ans. Due to association or dissociation of solute in given solvent.

Q. 4. Define molarity. How it is related with normality ?

Ans. $N = M \times \text{Basicity or acidity}$

Q. 5. How molarity is related with percentage and density of solution ?

Ans. $M = P \times d \times 10 / M.M_2$.

Q. 6. What role does the molecular interaction play in the solution of alcohol and water ?

Ans. Positive deviation from ideal behaviour.

Q. 7. What is van't Hoff factor ? How is it related with :

(a) degree of dissociation (b) degree of association

Ans. (a) $\alpha = i - 1/n - 1$ (b) $\alpha = i - 1/1/n - 1$

Q. 8. Why NaCl is used to clear snow from roads ?

Ans. It lowers freezing point of water.

Q. 9. Why the boiling point of solution is higher than pure liquid ?

Ans. Due to lowering in vapour pressure.

Q.10. Out of 1 M and 1 m aqueous solution which is more concentrated ?

Ans. 1 M as density of water is 1 gm/ml.

Q.11. Henry law constant for two gases are 21.5 and 49.5 atm, which gas is more soluble ?

Ans. K_H is inversely proportional to solubility.

Q.12. Define azeotrope. Give an example of maximum boiling azeotrope.

Q.13. Calculate the volume of 75% of H_2SO_4 by weight ($d = 1.8$ gm/ml) required to prepare 1 L of 0.2 M solution.

$$\text{Hint : } M_1 = P \times d \times 10/98$$

$$M_1 V_1 = M_2 V_2$$

$$= 14.5 \text{ ml}$$

Q.14. Why water cannot be completely separated from aqueous solution of ethyl alcohol ?

Ans. Due to formation of azeotrope at (95.4%).

Q.15. What is the molarity of pure water ?

Ans. 55.5

Q.16. Calculate the moles of PO_4^{-3} present in 4L of 10^{-5} M $Ca_3(PO_4)_2$.

Ans. 8×10^{-5}

Q.17. Why anhydrous salts like NaCl or $CaCl_2$ are used to clear snow from roads on hills ?

Hint : They depress freezing point of water.

Q.18. What is the effect on boiling and freezing point of a solution on addition of NaCl ?

Hint : Boiling point increases and freezing point decreases.

Q.19. Out of M and m, which is better concentration term and why ?

Hint : m, it is independent of temperature change.

Q.20. Why osmotic pressure is considered as colligative property ?

Hint : It depends upon number of moles of solute present in solution.

Q.21. Liquid A and B on mixing produce a warm solution. Which type of deviation does this solution show ?

Hint : – ve deviations

Q.22. Give an example of a compound in which hydrogen bonding results in the formation of a dimer.

Hint : Carboxylic acids or other example

Q.23. What role does the molecular interaction play in solution containing chloroform and acetone ?

Hint : H-bonding formed, results in negative deviation from Raoult's law.

SHORT ANSWER TYPE QUESTIONS (2 Marks)

- Q. 1.** Molecular weight of a solute X is greater than that of solute Y. Their equal weights are dissolved separately in the equal quantity of same solvent. Which solution will show greater relative lowering of vapour pressure and why ?
- Q. 2.** Out of the following three solutions, which has the highest freezing point and why ?
(a) 0.1 M urea (b) 0.1M BaCl₂ (c) 0.1M Na₂SO₄
- Q. 3.** Which of the following solutions have highest boiling point and why ?
(a) 1M glucose (b) 1M KCl (c) 1M aluminium nitrate
- Q. 4.** Equal moles of liquid P and Q are mixed. What is the ratio of their moles in the vapour phase ? Given that $P_p^0 = 2 \times P_Q^0$.
- Q. 5.** On mixing liquid X and Y, volume of the resulting solution decreases. What type of deviation from Raoult's law is shown by the resulting solution ? What change in temperature would you observe after mixing liquids X and Y ?
- Q. 6.** Explain the significance of Henry's constant (K_H). At the same temperature, hydrogen is more soluble in water than helium. Which of them will have higher value of K_H and why ?
- Q. 7. How many grams of KCl should be added to 1 kg of water to lower its freezing point to -8.0°C ? ($K_f = 1.86 \text{ K kg/mol}$)**

Ans. Since KCl dissociate in water completely, $i = 2$.

$$\Delta T_f = i K_f \times m$$

$$m = \frac{\Delta T_f}{i K_f}$$

$$m = \frac{8}{2 \times 1.86}$$

$$= 2.15 \text{ mol/kg}$$

$$\text{Grams of KCl} = 2.15 \times 74. = 160.2 \text{ g/kg}$$

- Q.8.** With the help of diagram, show the elevation in boiling point colligative properties ?
- Q. 9.** What do you mean by colligative properties ? Which colligative property is used to determine molar mass of polymer and why ?
- Q.10. Define reverse osmosis. Write its one use.**

Ans. Desalination of water.

Q.11. Why does an azeotropic mixture distill without any change in composition ?

Hint : It has same composition of components in liquid and vapour phase.

Q.12. Under what condition Van't Hoff factor is :

(a) equal to 1 ? (b) less than 1 ? (c) more than 1 ?

Q.13. If the density of some lake water is 1.25 gm/ml and contains 92 gm of Na^+ ions per kg of water, calculate the molality of Na^+ ion in the lake.

$$\text{Ans. } n = \frac{92}{23} = 4$$

$$m = \frac{4}{1} = 4m$$

Q.14. An aqueous solution of 2% non-volatile exerts a pressure of 1.004 Bar at the normal boiling point of the solvent. What is the molar mass of the solute ?

$$\text{Hint : } \frac{P_A^0 - P_A}{P_A^0} = \frac{w_B \times m_A}{m_B \times w_A}$$

$$\frac{1.013 - 1.004}{1.013} = \frac{2 \times 18}{m_B \times 98}$$

$$m_B = 41.35 \text{ gm/mol}$$

Q.15. Why is it advised to add ethylene glycol to water in a car radiator in hill station ?

Hint : Anti-freeze.

Q.16. Calculate the molarity of pure water ($d = 1 \text{ g mL}^{-1}$).

Ans. Density of water = 1 g mL^{-1}

$$\text{Mass of 1000 ml of water} = V \times d$$

$$= 1000 \text{ mL} \times 1 \text{ gm}^{-1}$$

$$= 1000 \text{ g}$$

$$\text{Moles of water} = \frac{1000}{18} = 55.55 \text{ mol}$$

Now, mole of H_2O present in 1000 mL or 1 L of water.

So, molarity = 55.55M

Q.17. Define Henry's law. Give their two application.

Q.18. The dissolution of ammonium chloride in water is endothermic process. What is the effect of temperature on its solubility ?

Ans. Since dissolution of NH_4Cl in water is endothermic process, its solubility increases with rise in temperature (*i.e.*, Le-Chatelier process).

Q.19. Two liquids A and B boil at 145°C and 190°C respectively. Which of them has higher vapour pressure at 80°C ?

Ans. Lower the boiling point more volatile is the respective compound. Therefore, liquid A will have higher vapour pressure at 80°C.

Q.20. Why is liquid ammonia bottle first cooled in ice before opening it ?

Ans. At room temperature, the vapour pressure of liquid ammonia is very high. On cooling vapour pressure decreases, therefore the liquid ammonia will not splash out.

Q.21. Which colligative property is preferred for the molar mass determination of macromolecules ?

Ans. Osmotic pressure measurement is preferred for molar mass determination because :

- (a) even in dilute solution the osmotic pressure values are appreciably high and can be measured accurately.
- (b) osmotic pressure can be measured at room temperature.

Q.22. Define osmotic pressure determined from the measurement of osmotic pressure of a solution.

Ans. Osmotic pressure : The excess pressure applied to solution side to stop the process of osmosis is known as osmotic pressure.

$$\pi \propto C$$

$$\pi \propto T$$

$$\pi \propto CT$$

$$\pi = CRT$$

$$\pi = \frac{n_B}{V} RT$$

$$= \frac{n_B}{M_B V} RT$$

$$M_B = \frac{n_B RT}{\pi V}$$

SHORT ANSWER-II TYPE QUESTIONS (3 Marks)

Q. 1. Determine the amount of CaCl_2 dissolved in 2.5L at 27°C such that its osmotic pressure is 0.75 atm at 27°C . (i for $\text{CaCl}_2 = 2.47$)

Ans. For CaCl_2 ,

$$i = 2.47$$

$$\pi = iCRT$$

$$= i \frac{n_B}{V} \times RT$$

$$0.75 = \frac{2.47 \times n_B \times 0.082 \times 300}{2.5}$$

$$n_B = \frac{0.75 \times 2.5}{2.47 \times 0.082 \times 300}$$

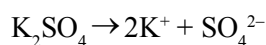
$$n_B = 0.0308 \text{ mol}$$

$$\text{Amount} = 0.0308 \text{ mol} \times 111 \text{ g mol}^{-1}$$

$$= 3.418 \text{ g}$$

Q. 2. Determine the osmotic pressure of a solution prepared by dissolving 25 mg of K_2SO_4 in 2 litre of water at 25°C assuming that it is completely dissociated.

Ans. If K_2SO_4 is completely dissociated,



$$i = 3$$

$$\text{Mol mass of } \text{K}_2\text{SO}_4 = 2 \times 39 + 32 + 4 \times 16 = 174 \text{ g mol}^{-1}$$

$$\pi = iCRT$$

$$= i \frac{W_B \times RT}{M_B \times V}$$

$$= \frac{3 \times 25 \times 10^{-3} \times 0.082 \times 298}{174 \times 2.0}$$

$$= 5.27 \times 10^{-3} \text{ atm}$$

Q. 3. If the solubility product of CuS is 6×10^{-16} , calculate the maximum molarity of CuS in aqueous solution.

Ans. K_{sp} of CuS = 6×10^{-16}

If S is the solubility, then



$$[\text{Cu}^{2+}] = S, [\text{S}^{2-}] = S$$

$$\begin{aligned} K_{sp} &= [\text{Cu}^{2+}][\text{S}^{2-}] \\ &= S \times S = S^2 \end{aligned}$$

$$\begin{aligned} \text{Solubility } S &= \sqrt{K_{sp}} = \sqrt{6 \times 10^{-16}} \\ &= 2.45 \times 10^{-8} \text{ M} \end{aligned}$$

$$\text{Highest molarity} = 2.45 \times 10^{-8} \text{ M}$$

Q. 4. Suggest the most important type of intermolecular attractive interaction in the following pairs :

(a) n-hexane and n-octane

(b) I_2 and CCl_4

(c) NaClO_4 and water

Ans. (a) Vander Waals interaction

(b) Vander Waals interaction

(c) Ion-dipole interaction

Q. 5. The vapour pressure of water is 12.3 Kpa at 300K. Calculate vapour pressure of 1 molal solution of a non-volatile solute in it.

Ans. Mole fraction of solute = $\frac{1}{1 + \frac{1000}{18}} = 0.0177$

$$\frac{P^0 - P_A}{P^0} = 0.0177$$

$$\frac{12.3 - P_A}{12.3} = 0.0177$$

$$P_A = 12.08 \text{ Kpa}$$

Q. 6. 6.90M solution of KOH in water contains 30% by mass of KOH. Calculate the density of the KOH solution. (Molar mass of KOH = 56 g mol^{-1})

Ans. Mass of KOH = 30 g

$$M = \frac{n_B}{V(\text{ml})} \times 1000$$

$$= \frac{W_B}{M_B \times V(\text{ml})} \times 1000 = \frac{30}{56 \times V} \times 1000$$

$$6.90 = \frac{30 \times 1000}{56 \times V}$$

$$V = \frac{30 \times 1000}{56 \times 6.90} = 81.43 \text{ mL}$$

$$D = \frac{M}{V}$$

$$= \frac{100}{81.43} = 1.28 \text{ g mL}^{-1}$$

Q. 7. An anti-freeze solution is prepared from 222.6 g of ethylene glycol $\text{C}_2\text{H}_4(\text{OH})_2$ and 200 g of water. Calculate the molality of the solution. If the density of this solution be 1.072 g mL^{-1} , what will be the molarity of the solution ?

Ans. M_B of $\text{C}_2\text{H}_4(\text{OH})_2 = 62 \text{ g mol}^{-1}$

$$\text{Molality} = \frac{n_B}{W} \times 1000 = \frac{W_B}{M \times W} \times 1000 = \frac{222.6 \times 1000}{62 \times 200}$$

$$= 17.95\text{m}$$

$$\text{Density} = \frac{\text{Mass}}{\text{Volume}}$$

So,
$$\text{Volume} = \frac{\text{Mass}}{\text{Density}} = \frac{422.6}{1.072} = 394.22 \text{ ml}$$

$$M = \frac{n_B}{V} \times 1000$$

$$= \frac{222.6}{394.22 \times 62} \times 1000 = 9.11\text{M}$$

Q. 8. What would be the molar mass of compound if 6.21 g of it is dissolved in 24.0 g of CHCl_3 from a solution that has a boiling point of 68.04°C . The boiling point of pure chloroform is 61.7°C and the boiling point elevation constant K_b for chloroform is 3.63°C/m .

Ans. Elevation in boiling point $\Delta T_b = 68.04 - 61.7 = 6.31^\circ\text{C}$

$$\text{Mass of substance } W_B = 6.21 \text{ g}$$

$$\text{Mass of } \text{CHCl}_3 W_A = 24.0 \text{ g}$$

$$K_B = 3.63 \text{ }^\circ\text{C/m}$$

$$M_B = \frac{K_b \times W_B \times 1000}{\Delta T_b \times W_A} = \frac{3.63 \times 6.21 \times 1000}{6.34 \times 24}$$

$$= 148.15 \text{ g mol}^{-1}$$

Q. 9. A solution of glycerol ($C_3H_8O_3$) in water was prepared by dissolving some glycerol in 500 g of water. This solution has a boiling point of 100.42°C while pure water boils at 100°C . What mass of glycerol was dissolved to make the solution? ($K_b = 0.512 \text{ K kg mol}^{-1}$)

Ans. 37.73 g

Q.10. 18 g of glucose ($C_6H_{12}O_6$) (molar mass = 180 g mol^{-1}) is dissolved in 1 kg of water in a sauce pan. At what temperature will this solution boil? (K_b for water = $0.52 \text{ K kg mol}^{-1}$, boiling point of pure water = 373.1 K)

Ans. 373.202 K

LONG ANSWER TYPE QUESTIONS (5 Marks)

Q. 1. (a) Define Raoult's law of binary solution containing non-volatile solute in it.

(b) On dissolving 3.24 g of sulphur in 40 g of benzene, boiling point of solution was higher than that of benzene by 0.81K ($K_b = 2.53 \text{ K kg mol}^{-1}$). What is molecular formula of sulphur? (Atomic mass $s = 32 \text{ g mol}^{-1}$)

Ans. (a) At a given temperature, the vapour pressure of a solution containing non-volatile solute is directly proportional to the mole fraction of the solvent.

(b)

$$M_B = \frac{K_b \times W_B \times 1000}{\Delta T_b \times W_A} = \frac{3.63 \times 6.21 \times 1000}{6.34 \times 24}$$

$$= 148.15 \text{ g mol}^{-1}$$

Let the molecular formula of sulphur = S_x

Atomic mass of sulphur = 32

Molecular mass = $32 \times x$

$32x = 253$

$x = 7.91 \approx 8$

Molecular formula of sulphur = S_8

Q. 2. (a) Outer shells of two eggs are removed. One of the egg is placed in pure water and the other is placed in saturated solution of NaCl. What will be observed and why?

(b) A solution prepared by dissolving 8.95 mg of a gene fragment in 35.0 ml of water has an osmotic pressure of 0.335 ton at 25°C . Assuming the gene fragment is a non-electrolyse, determine the molar mass.

Ans. (a) In pure water the egg swells and in saturated solution of NaCl it will shrink.

(b) Mass of gene fragment = 8.95 mg
 $= 8.95 \times 10^{-3} \text{ g}$

Volume of water = 35.0 ml = $35 \times 10^{-3} \text{ L}$

$\pi = 0.335 \text{ ton} = 0.335/760 \text{ atm}$

Temp = $25 + 273 = 298 \text{ K}$

$$\pi = \frac{W_B RT}{M_B \times V}$$

$$\frac{0.335}{760} = \frac{8.95 \times 10^{-3} \times 0.0821 \times 298}{M_B \times 35 \times 10^{-3}}$$

$$M_B = 141933 \text{ g mol}^{-3}$$

Q. 3. (a) Define van't Hoff factor.

(b) Calculate the freezing point depression expected for 0.0711M aqueous solution of Na_2SO_4 . If this solution actually freezes at -0.320°C , what would be the value of van't Hoff factor? ($K_f = 1.86^\circ\text{C mol}^{-1}$)

Ans. (a) **Van't Hoff factor :** It is the ratio of the normal molar mass to the observed molar mass of the solute.

(b) $\Delta T_f = K_f \times M$

$$\Delta T_f = 1.86 \times 0.0711 = 0.132$$

Observed freezing point = $0 - (-0.320) = 0.320^\circ\text{C}$

$$i = \frac{\text{Observed freezing point}}{\text{Calculate freezing point}}$$

$$= \frac{0.320}{0.132} = 2.42$$

Q. 4. (a) What is the value of i when solute is associated and dissociated ?

(b) Calculate the freezing point of an aqueous solution containing 10.50 g of MgBr_2 in 200 g of water. (Molar mass of $\text{MgBr}_2 = 184$, $K_f = 1.86 \text{ K kg mol}^{-1}$)

Ans. (a) $i < 1$ when solute is associated and
 $i > 1$ when solute is dissociated.

(b) $m = \frac{n_g \times 1000}{W_A (g)}$

$$= \frac{W_B \times 1000}{M_B \times W_A} = \frac{10.50 \times 1000}{184 \times 200} = 0.2853\text{M}$$



$$i = 3$$

$$\Delta T_f = i \times K_f \times M$$

$$= 3 \times 1.86 \times 0.2855$$

$$= 1.59$$

$$\text{Freezing point} = 0 - 1.59^\circ\text{C} = -1.59^\circ\text{C}$$

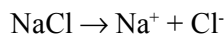
- Q. 5. (a) What is the value of i for $\text{Al}_2(\text{SO}_4)_3$ when it is completely dissociated ?**
- (b) Calculate the boiling point of a solution prepared by adding 15.00 g of NaCl to 250 g of water. ($K_b = 0.512 \text{ K kg mol}^{-1}$ and molar mass of NaCl = 58.44 g mol^{-1})**



$$i = 5$$

$$\Delta T_b = \frac{iK_b \times 1000 \times W_B}{W_A \times M_B}$$

(b)



$$i = 2$$

$$\Delta T_b = \frac{2 \times 0.512 \times 1000 \times 15}{250 \times 58.44}$$

$$= 1.05$$

$$\text{Boiling point of solution} = 100 + 1.05$$

$$= 101.05^\circ\text{C}$$

VALUE BASED QUESTIONS (4 Marks)

- Q. 1.** Scuba divers when come towards the surface, pressure gradually decreases resulting in release of dissolved gases leading to formation of bubbles of N_2 gas in the blood which block the capillaries and thus bends are created. To avoid bends and toxic effect of high concentration of N_2 gas, the air is diluted with helium.

After the above passage, answer the following :

- (a) Why is the harmful condition of bends overcome by the use of helium ?
- (b) Which law is used to calculate the concentration of gases in solution ?

- (c) Mention the value associated with providing divers air diluted with helium.
- (d) Which gas has less value of K_H , O_2 or He, and why ?
- Q. 2.** Ram takes an open pan to cook vegetables at a hill station while Shyam cooked the same in a pressure cooker at the same place.
- (a) Define normal boiling point of a liquid.
- (b) Explain the reason who will cook vegetables faster.
- (c) Mention the reason for delay in cooking.
- (d) Which value is learnt by the student in the process of cooking food in pressure cooker ?
- Q. 3.** Sneha's grandmother lives in Manali. In winter, there is a lot of snow in front of the house. She asked Sneha to clear the snow. Sneha added NaCl to snow to clear it.
- (a) Why Sneha does so ?
- (b) Is the addition of $Ca(NO_3)_2$ a better choice than NaCl ? If yes, why ?
- (c) What is the value in Sneha's thinking ?
- (d) Define molal freezing point, depression constant, K_f .
- Q. 4.** Ira Singh, a student of class XII Chemistry stated that normal saline solution having 0.9% (mass/volume) NaCl is isotonic with the fluid inside the cell. Therefore, it is safe to inject normal saline solution intravenously.
- (a) Define isotonic solutions. What would happen if the concentration of saline solution is (a) more, (b) less than 0.9% (mass/volume) NaCl ?
- (b) What values are associated with the statement of Ira Singh ?



UNIT 3

ELECTROCHEMISTRY CONCEPTS

Points to Remember

Electrochemistry may be defined as the branch of chemistry which deals with the quantitative study of inter-relationship between chemical energy and electrical energy and inter-conversion of one form into another relationships between electrical energy taking place in redox reactions.

A cell is of two types :

- I. Galvanic cell
- II. Electrolytic cell

In Galvanic cell, the chemical energy of a spontaneous redox reaction is converted into electrical work.

In Electrolytic cell, electrical energy is used to carry out a non-spontaneous redox reaction.

1. Conductivity (k) :

$$k = \frac{1}{\rho} = \frac{1}{R} \times \frac{l}{A}$$

where R is Resistance, l/A = cell constant (G^*) and ρ is resistivity.

2. Relation between k and Λ_m

$$\Lambda_m = \frac{1000 \times k}{C}$$

where Λ_m is molar conductivity, k is conductivity and C is molar concentration.

Kohlrausch's law :

- (a) In general, if an electrolyte on dissociation give ν_+ cations and ν_- anions, then its limiting molar conductivity (Λ_m°) is given by

$$\Lambda_m^\circ = \nu_+ \lambda_+^\circ + \nu_- \lambda_-^\circ$$

Here, λ_+° and λ_-° are the limiting molar conductivities of cation and anion respectively and ν_+ and ν_- are the number of cations and anions furnished by one formula unit of the electrolyte.

(b) Degree of dissociation (α) is given by :

$$\alpha = \frac{\Lambda_m^c}{\Lambda_m^o}$$

Here, Λ_m^c = is molar conductivity at the concentration C and Λ_m^o is limiting molar conductivity of the electrolyte.

(c) Dissociation constant (K) of weak electrolyte :

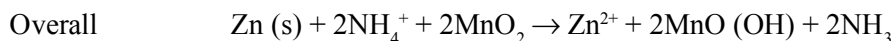
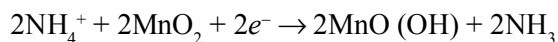
$$K = \frac{C\alpha^2}{1-\alpha} = \frac{C \left(\frac{\Lambda_m^c}{\Lambda_m^o} \right)^2}{\left(1 - \frac{\Lambda_m^c}{\Lambda_m^o} \right)}$$

Dry cell :

At anode (Oxidation)

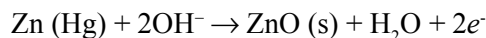


At cathode (Reduction)

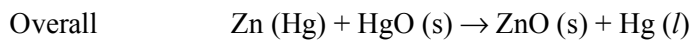
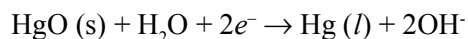


Mercury cell :

At anode (Oxidation)

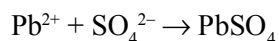
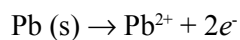


At cathode (Reduction)

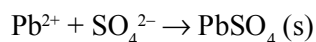
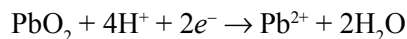


Lead storage cell

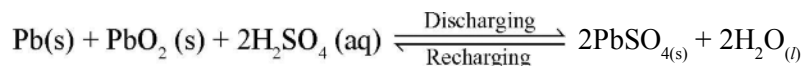
At anode (Oxidation)



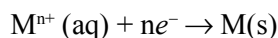
At cathode (Reduction)



Overall



3. Nernst Equation for electrode reaction :



$$E = E^\theta - \frac{2.303RT}{nF} \log \frac{1}{[\text{M}^{n+}]} = E^\theta - \frac{0.059}{n} \text{V} \log \frac{1}{[\text{M}^{n+}]}$$

The cell potential of electrochemical reaction : $a\text{A} + b\text{B} \xrightarrow{ne^-} c\text{C} + d\text{D}$ is given by :

$$E_{\text{cell}} = E^\theta_{\text{cell}} - \frac{2.303RT}{nF} \log [Q_c] = E^\theta - \frac{0.059}{n} \text{V} \log \frac{[\text{C}]^c [\text{D}]^d}{[\text{A}]^a [\text{B}]^b}$$

4. Relation between E^θ_{cell} and equilibrium constant (K_c) :

$$E^\theta_{\text{cell}} = \frac{2.303RT}{nF} \log K_c = \frac{0.059}{n} \text{V} \log K_c$$

5. $\Delta G^0 = -nF E^\theta_{\text{cell}}$

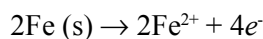
where ΔG^0 = standard Gibbs energy change and nF is the number of Faradays of charge passed. E^θ_{cell} is standard cell potential.

$$\Delta G^0 = -2.303 RT \log K_c$$

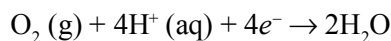
Corrosion of metals is an electrochemical phenomenon.

In corrosion, metal is oxidized by loss of electrons to oxygen and formation of oxides.

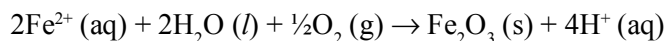
At anode (Oxidation) :



At cathode (Reduction) :



Atmospheric oxidation :



VERY SHORT ANSWER TYPE QUESTIONS (1 Mark)

Q. 1. What is the effect of temperature on molar conductivity ?

Ans. Molar conductivity of an electrolyte increases with increase of temperature.

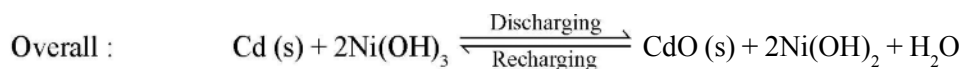
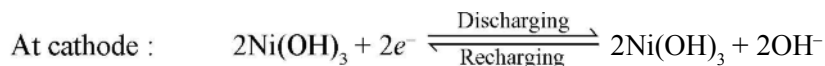
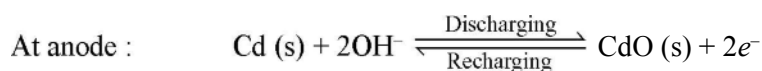
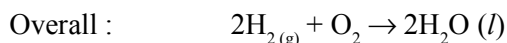
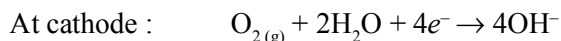
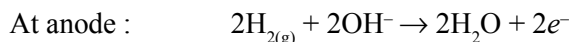
Q. 2. Why is it not possible to measure single electrode potential ?

Ans. Because the half cell containing single electrode cannot exist independently, as charge cannot flow on its own in a single electrode.

Q. 3. Name the factor on which emf of a cell depends.

Ans. Emf of a cell depends on following factors :

- (a) Nature of reactants
- (b) Concentration of solution in two half cells
- (c) Temperature

Nickel-Cadmium cell :**Fuel cell :**

$$E^\circ_{\text{cell}} = 0.9\text{V}$$

Q. 4. What is the effect of temperature on the electrical conductance of metal ?

Ans. Temperature increases, electrical conductance decreases.

Q. 5. What is the effect of temperature on the electrical conductance of electrolyte ?

Ans. Temperature increases, electrical conductance increases.

Q. 6. What is the relation between conductance and conductivity ?

$$\text{Ans. } \quad \Lambda_m^c = \frac{k}{C}$$

Q. 7. What is the Debye-Huckel-Onsagar equation ?

$$\text{Ans. } \quad \Lambda_m^c = \Lambda_m^\circ - A\sqrt{C}$$

Q. 8. Reduction potentials of 4 metals A, B, C and D are -1.66 V , $+0.34\text{ V}$, $+0.80\text{ V}$ and -0.76 V . What is the order of their reducing power and reactivity ?

Ans. $A > D > B > C$

Q. 9. Why does a dry cell become dead even if it has not been used for a long time ?

Ans. NH_4Cl is acidic in nature. It corrodes zinc container.

Q.10. Write the overall reaction taking place in rusting.

Ans. $2\text{Fe} + \text{O}_2 + 4\text{H}^+ \rightarrow 2\text{Fe}^{2+} + 2\text{H}_2\text{O}$

Q.11. Write the reaction taking place in the cell : $\text{Al}/\text{Al}^{3+} \parallel \text{Cu}^{2+}/\text{Cu}$

Ans. $2\text{Al} + 3\text{Cu}^{2+} \rightarrow 2\text{Al}^{3+} + 3\text{Cu}$

Q.12. Why Na cannot be obtained by the electrolysis of aqueous NaCl solution ?

Ans. Due to low reduction potential, Na^+ ions are not reduced at cathode. Instead, H^+ are reduced and H_2 is obtained.

Q.13. What is the use of platinum foil in the hydrogen electrode ?

Ans. It is used for the in flow and out flow of electrons.

Q.14. Why Λ_m° for CH_3COOH cannot be determined experimentally ?

Ans. Molar conductivity of weak electrolytes keeps on increasing with dilution and does not become constant even at very large dilution.

Q.15. Why is it necessary to use a salt bridge in a galvanic cell ?

Ans. To complete the inner circuit and to maintain electrical neutrality of the electrolytic solutions of the half cells.

Q.16. Why does mercury cell gives a constant voltage throughout its life ?

Ans. This is because the overall cell reaction does not have any ionic concentration in it.

Q.17. What is the role of ZnCl_2 in a dry cell ?

Ans. ZnCl_2 combines with the NH_3 produced to form a complex salt $[\text{Zn}(\text{NH}_3)_4]^{2+}$.

Q.18. Why does the conductivity of a solution decrease with dilution ?

Ans. Conductivity of a solution is dependent on the number of ions per unit volume. On dilution, the number of ions per unit volume decreases, hence the conductivity decreases.

Q.19. Suggest two materials other than hydrogen that can be used as fuels in fuel cells.

Ans. Methane and methanol.

Q.20. How does the pH of Al-NaCl solution be affected when it is electrolysed ?

Ans. When Al-NaCl solution is electrolysed, H_2 is liberated at cathode, Cl_2 at anode and NaOH is formed in the solution. Hence pH of solution increases.

Q.21. Which reference electrode is used to measure the electrode potential of other electrodes.

Ans. SHE, whose electrode potential is taken as zero.

Q.22. Out of zinc and tin, which one protects iron better even after cracks and why ?

Ans. Zinc protects better because oxidation of zinc is greater but that of tin is less than that of iron.

Q.23. Define corrosion. What is the chemical formula of rust ?

Ans. Corrosion is the slow eating away of the surface of the metal due to attack of atmospheric gases. $Fe_2O_3 \cdot xH_2O$.

Q.24. What is the EMF of the cell when the cell reaction attains equilibrium ?

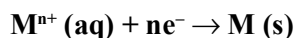
Ans. Zero.

Q.25. What is the electrolyte used in a dry cell ?

Ans. A paste of NH_4Cl .

SHORT ANSWER-I TYPE QUESTIONS (2 Marks)

Q. 1. How can you increase the reduction potential of an electrode for the reaction :



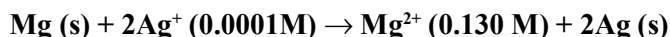
Ans. Nernst equation is :

$$E_{M^{n+}/M} = E_{M^{n+}/M} - \frac{0.0591}{n} \log \frac{1}{[M^{n+}]}$$

$E_{M^{n+}/M}$ can be increased by

- (a) Increase in concentration of M^{n+} ions in solution.
- (b) By increasing the temperature.

Q. 2. Calculate emf of the following cell at 298 K :



[Given : $E_{cell}^{\theta} = 3.17 V$]

Ans. $n = 2$

The Nernst equation for the cell is :

$$\begin{aligned} E &= E^\theta - \frac{0.059}{2} \log \frac{[\text{Mg}^{2+}]}{[\text{Ag}^+]^2} \\ &= 3.17 - \frac{0.059}{2} \log \frac{.130}{(.0001)^2} \\ &= 3.17 - 0.21 = 2.96\text{V} \end{aligned}$$

Q. 3. Suggest a way to determine the Λ_m° value of water.

Ans. $\Lambda_m^\circ (\text{H}_2\text{O}) = \Lambda_m^\circ_{\text{H}^+} + \Lambda_m^\circ_{\text{OH}^-}$

It can be determine from the value of Λ_m° (HCl), Λ_m° (NaOH) and Λ_m° (NaCl).
Then,

$$\Lambda_m^\circ (\text{H}_2\text{O}) = \Lambda_m^\circ (\text{HCl}) + \Lambda_m^\circ (\text{NaOH}) - \Lambda_m^\circ (\text{NaCl})$$

Q. 4. How much electricity in term of Faraday is required to produce 40 gram of Al from Al_2O_3 ? (Atomic mass of Al = 27 g/mol)

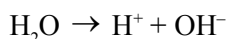
Ans. $\text{Al}^{3+} + 3e^- \rightarrow \text{Al}$

27 gram of Al require electricity = 3F

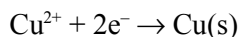
$$\begin{aligned} 40 \text{ gram of Al require electricity} &= \frac{3\text{F}}{27} \times 40 \\ &= 4.44 \text{ F} \end{aligned}$$

Q. 5. Predict the product of electrolysis of an aqueous solution of CuCl_2 with an inert electrode.

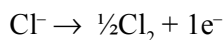
Ans. $\text{CuCl}_2 (\text{s}) + \text{Aq} \rightarrow \text{Cu}^{2+} + 2\text{Cl}^-$



At cathode (Reduction) : Cu^{2+} will be reduced in preference to H^+ ions.



At anode (Oxidation) : Cl^- ions will be oxidized in preference to OH^- ions.



Thus, Cu will be deposited at cathode and Cl_2 will be liberated at anode.

Q. 6. Calculate Λ_m° for CaCl_2 and MgSO_4 from the following data :

$$\Lambda_m^\circ (\text{Ca}^{2+}) = 119.0, \text{Mg}^{2+} = 106.0, \text{Cl}^- = 76.3 \text{ and } \text{SO}_4^{2-} = 160.05 \text{ cm}^2 \text{ mol}^{-1}$$

Ans. $\Lambda_{m(\text{CaCl}_2)}^\circ = \Lambda_{m(\text{Ca}^{2+})}^\circ + 2\Lambda_{m(\text{Cl}^-)}^\circ$
 $= 119 + (2 \times 76.3) = 271.6 \text{ S cm}^2 \text{ mol}^{-1}$

$$\Lambda_{m(\text{MgSO}_4)}^\circ = \Lambda_{m(\text{Mg}^{2+})}^\circ + 2\Lambda_{m(\text{SO}_4^{2-})}^\circ$$

$$= 106 + 160 = 266 \text{ S cm}^2 \text{ mol}^{-1}$$

Q. 7. If Λ_m° for AgNO_3 , KCl and KNO_3 are 133.4, 149.9 and 144.9 $\text{S cm}^2 \text{ mol}^{-1}$, calculate Λ_m° for AgCl .

Ans. 138.4 $\text{S cm}^2 \text{ mol}^{-1}$

Q. 8. Calculate the potential of hydrogen electrode in contact with a solution whose pH is 10.

Ans. $\text{H}^+ + e^- \rightarrow \frac{1}{2}\text{H}_2$ $n = 1$

$$E = E^\circ - \frac{0.0591}{n} \log \frac{1}{[\text{H}^+]}$$

$$E = 0 - \frac{0.0591}{1} \times \text{pH}$$

$$E = -0.0591 \times 10$$

$$E = -0.591 \text{ V}$$

Q. 9. If a current of 0.5 amp flows through a metallic wire for 2 hours, how many electrons would flow through the wire ?

Ans. $q = i \times t = 0.5 \times 2 \times 60 \times 60 = 3600 \text{ C}$

96500 Coulombs are equal to $6.022 \times 10^{23} e^-$

$$\text{So, } 3600 \text{ Coulombs} = \frac{6.022 \times 10^{23}}{96500} \times 3600 = 2.246 \times 10^{22} \text{ electrons}$$

Q.10. How much electricity is required in Coulomb for the oxidation of 1 mole of FeO to Fe_2O_3 ?

Ans. $\text{Fe}^{2+} \rightarrow \text{Fe}^{3+} + 1e^-$

So, 1F = $1 \times 96500 \text{ C} = 96500 \text{ C}$

Q.11. The conductivity of a 0.20M solution of KCl at 298K is 0.0248 S cm^{-1} . Calculate molar conductivity.

Ans. Molar conductivity = $\frac{k \times 1000}{M} = \frac{0.0248 \text{ S cm}^{-1} \times 1000 \text{ cm}^3 \text{ L}^{-1}}{0.2 \text{ mol L}^{-1}}$
 $= 124.0 \text{ S cm}^2 \text{ mol}^{-1}$

Q.12. Define conductivity and molar conductivity for a solution of an electrolyte.

Ans. Conductivity is defined as ease with which current flows through electrolyte. It is reciprocal of specific resistance. Molar conductivity is conductance of all the ions produced by one mole of electrolyte when electrodes are at unit distance apart and have sufficient area of cross-section to hold electrolyte.

Q.13. The resistance of conductivity cell containing 0.001M KCl solution at 298K is 1500Ω. What is the cell constant if the conductivity of 0.001M KCl solution at 298K is $0.146 \times 10^{-3} \text{ S cm}^{-1}$.

Ans. Cell constant = Conductivity \times Resistance
 $= 0.146 \times 10^{-3} \text{ S cm}^{-1} \times 1500\Omega = 0.219 \text{ cm}^{-1}$

Q.14. Indicate the reactions which take place at cathode and anode in fuel cell.

Ans. At cathode : $\text{O}_2 (\text{g}) + 2\text{H}_2\text{O} + 4e^- \rightarrow 4\text{OH}^- (\text{aq})$

At anode : $2\text{H}_2 (\text{g}) + 4\text{OH}^- (\text{aq}) \rightarrow 4\text{H}_2\text{O} + 4e^-$

The overall reaction is : $2\text{H}_2 (\text{g}) + \text{O}_2 (\text{g}) \rightarrow 4\text{H}_2\text{O} (\text{l})$

Q.15. Explain Kohlrausch's law of independent migration of ions.

Ans. It states that at infinite dilution, molar conductivity of an electrolyte is equal to sum of contributions due to cation as well as anion.

$$\Lambda_{m(\text{Na}_2\text{SO}_4)}^\infty = 2\Lambda_{m(\text{Na}^+)}^\infty + \Lambda_{m(\text{SO}_4^{2-})}^\infty$$

Q.16. Write the electrode reactions for anode and cathode in a mercury cell.

Ans. At anode : $\text{Zn (amalgam)} + 2\text{OH}^- \rightarrow \text{ZnO} + \text{H}_2\text{O} + 2e^-$

At cathode : $\text{HgO (s)} + \text{H}_2\text{O (l)} + 2e^- \rightarrow \text{Hg (l)} + 2\text{OH}^- (\text{aq})$

The overall reaction is : $\text{Zn (amalgam)} + \text{HgO (s)} \rightarrow \text{ZnO (s)} + \text{Hg (l)}$

Q.17. The standard reduction potential for the $\text{Zn}^{2+} (\text{aq})/\text{Zn (s)}$ half cell is -0.76V . Write the reactions occurring at the electrodes when coupled with standard hydrogen electrode (SHE).

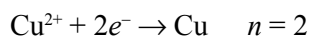
Ans. At anode : $\text{Zn (s)} \rightarrow \text{Zn}^{2+} (\text{aq}) + 2e^-$

At cathode : $2\text{H}^+ + 2e^- \rightarrow \text{H}_2 (\text{g})$

$\text{Zn (s)} + 2\text{H}^+ (\text{al}) \rightarrow \text{Zn}^{2+} (\text{aq}) + \text{H}_2 (\text{g})$

Q.18. Calculate the electrode potential of a copper wire dipped in 0.1M CuSO_4 solution at 25°C . The standard electrode potential of copper is 0.34 Volt.

Ans. The electrode reaction written as reduction potential is



$$E_{\text{Cu}^{2+}/\text{Cu}} = E^0_{\text{Cu}^{2+}/\text{Cu}} - \frac{0.0591}{2} \log \frac{1}{[\text{Cu}]} = 0.34 - \frac{0.0591}{2} \log \frac{1}{0.1} = 0.3104 \text{ V}$$

Q.19. Two metals A and B have reduction potential values -0.76 V and $+0.34 \text{ V}$ respectively. Which of these will liberate H_2 from dil. H_2SO_4 ?

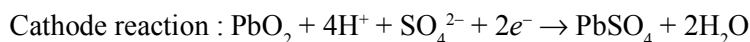
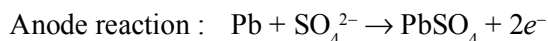
Ans. Metal having higher oxidation potential will liberate H_2 from H_2SO_4 . Thus, A will liberate H_2 from H_2SO_4 .

Q.20. How does conc. of sulphuric acid change in lead storage battery when current is drawn from it ?

Ans. Concentration of sulphuric acid decreases.

Q.21. What type of a battery is lead storage cell ? Write the anode and cathode reaction and overall reaction occurring in a lead storage battery during discharging and recharging of cell.

Ans. It is a secondary cell.



Q.22. Why does the cell potential of mercury cell remain constant throughout its life ?

Ans. This is because the overall cell reaction does not involve any ion in the solution whose concentration changes during its life time.

Q.23. Why is alternating current used for measuring resistance of an electrolytic solution ?


Ans. The alternating current is used to prevent electrolysis so that the concentration of ions in the solution remains constant.

Q.24. Consider a cell given below :



Write the reaction that occur at anode and cathode of the cell

Ans. Anode : $\text{Cu} \rightarrow \text{Cu}^{2+} + 2e^-$



Q.25. Suggest two materials other than hydrogen that can be used as fuels in fuel cells.

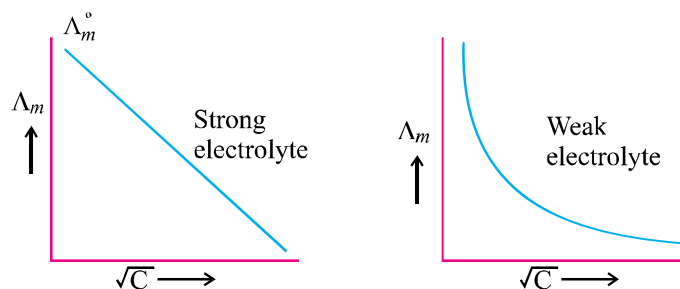
Ans. Methane and Ethane.

Q.26. E^0 values of MnO_4^- , Ce^{4+} and Cl_2 are 1.507, 1.61 and 1.358 V respectively. Arrange these in order of increasing strength as oxidizing agent.

Ans. $\text{Cl}_2 < \text{MnO}_4^- < \text{Ce}^{4+}$

Q.27. Draw a graph between Λ_m° and \sqrt{C} for strong and weak electrolyte.

Ans.



Q.28. The conductivity of 0.02M solution of NaCl is $2.6 \times 10^{-2} \text{ S cm}^{-1}$. What is its molar conductivity ?

Ans.

$$k = 2.6 \times 10^{-2} \text{ S cm}^{-1}$$

$$C = 0.02\text{M}$$

$$\Lambda_m = \frac{k \times 1000}{C(\text{M})}$$

$$= \frac{2.6 \times 10^{-2} \times 1000}{0.02}$$

$$= \frac{26 \times 100}{0.02 \times 100} = \frac{26 \times 10^2}{2}$$

$$= 13 \times 10^2 \text{ S cm mol}^{-1}$$

Q.29. Give products of electrolysis of an aqueous solution of AgNO_3 with silver electrode.

Ans. At anode : $\text{Ag (s)} \rightarrow \text{Ag}^+ + e^-$

At cathode : $\text{Ag}^+ + e^- \rightarrow \text{Ag (s)}$

SHORT ANSWER-II TYPE QUESTIONS

Q. 1. A solution of CuSO_4 is electrolysed for 10 mins. with a current of 1.5 amperes. What is the mass of copper deposited at the cathode ?

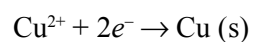
Ans.

$$I = 1.5 \text{ Ampere}$$

$$\text{Time} = 10 \times 60\text{s} = 600\text{s}$$

$$Q = I \times t$$

$$= 1.5 \times 600 = 900 \text{ C}$$

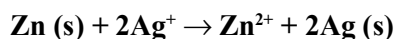


2F amount of electricity deposit copper = 63.5 g

$$900 \text{ C amount of electricity deposit copper} = \frac{63.5 \times 900}{2 \times 96500}$$

$$= 0.296 \text{ g}$$

Q. 2. Depict the galvanic cell in which the reaction

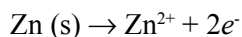


takes place. Further show :

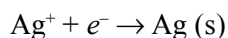
- Which of the electrode is negatively charged ?
- The carriers of the current in the cell.
- Individual reaction at each electrode.

Ans. $\text{Zn (s)}|\text{Zn}^{2+} \text{ (aq)} \parallel \text{Ag}^+ \text{ (aq)}|\text{Ag (s)}$

- Zn electrode (anode)
- Ions are carriers of the current in the cell.
- At anode :



At cathode :



Q. 3. The resistance of a conductivity cell containing 0.001M KCl solution at 298 K is 1500 Ω . What is the cell constant if conductivity of 0.001M KCl solution at 298 K is $0.146 \times 10^{-3} \text{ S cm}^{-1}$?

Ans. Cell constant = $k \times R$

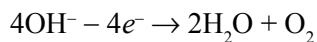
$$= 0.146 \times 10^{-3} \times 1500$$

$$= 0.219 \text{ cm}^{-1}$$

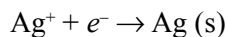
Q. 4. Predict the products of electrolysis in each of the following :

- An aqueous solution of AgNO_3 with platinum electrodes.
- An aqueous solution of CuCl_2 with Pt electrodes.

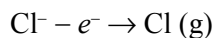
Ans. (a) At anode (Oxidation)

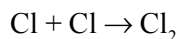


At cathode (Reduction)

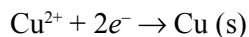


(b) At anode (Oxidation)





At cathode (Reduction)



Q. 5. The standard reduction potential for Cu^{2+}/Cu is 0.34 V. Calculate the reduction potential at pH = 14 for the above couple. K_{sp} of $\text{Cu}(\text{OH})_2$ is 1×10^{-19} .

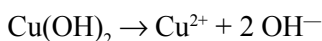
Ans.

$$\text{pH} = 14$$

$$[\text{H}^+] = 10^{-14} \quad \{ \because \text{pH} = -\log [\text{H}^+] \}$$

$$K_w = [\text{H}^+][\text{OH}^-]$$

$$[\text{OH}^-] = \frac{k_w}{[\text{H}^+]} = \frac{10^{-14}}{10^{-14}} = 1$$

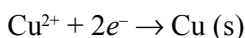


$$K_{\text{sp}} = [\text{Cu}^{2+}][\text{OH}^-]^2$$

$$1 \times 10^{-19} = [\text{Cu}^{2+}](1)^2$$

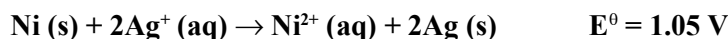
$$[\text{Cu}^{2+}] = 1 \times 10^{-19}$$

For the cell reaction,



$$\begin{aligned} E &= E^0 - \frac{0.059}{2} \log \frac{1}{[\text{Cu}^{2+}]} \\ &= 0.34 - \frac{0.059}{2} \log \frac{1}{1 \times 10^{-19}} \\ &= 0.34 - \frac{0.059}{2} \times 19 = -0.22 \text{ V} \end{aligned}$$

Q. 6. Determine the values of equilibrium constant K_c and ΔG^0 for the following reaction :



Ans.

$$\Delta G^0 = -nFE_{\text{cell}}^0$$

$$n = 2, E_{\text{cell}}^0 = 1.05 \text{ V}$$

$$F = 96500 \text{ C mol}^{-1}$$

$$\Delta G^0 = -2 \times 1.05 \times 96500$$

$$= -202.650 \text{ kJ}$$

$$\Delta G^0 = -RT \ln K_c$$

$$\ln K_c = -\frac{\Delta G^\theta}{RT} = \frac{-202.650 \times 10^3}{8.314 \times 298}$$

$$K_c = 3.32 \times 10^{35}$$

Q. 7. The K_{sp} for AgCl at 298 K is 1.0×10^{-10} . Calculate the electrode potential for Ag^+/Ag electrode immersed in 1.0M KCl solution. Given $E^\theta_{\text{Ag}^+/\text{Ag}} = 0.80 \text{ V}$.

Ans. $\text{AgCl (s)} \rightleftharpoons \text{Ag}^+ + \text{Cl}^-$

$$K_{sp} = [\text{Ag}^+][\text{Cl}^-]$$

$$[\text{Cl}^-] = 1.0 \text{ M}$$

$$[\text{Ag}^+] = \frac{K_{sp}}{[\text{Cl}^-]} = \frac{1 \times 10^{-10}}{1} = 1 \times 10^{-10} \text{ M}$$

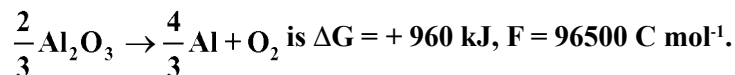
Now, $\text{Ag}^+ + e^- \rightarrow \text{Ag (s)}$

$$E = E^\theta - \frac{0.059}{1} \log \frac{1}{[\text{Ag}^+]}$$

$$= 0.80 - \frac{0.059}{1} \log \frac{1}{10^{-10}}$$

$$= 0.80 - 0.059 \times 10 = 0.21 \text{ V}$$

Q. 8. Estimate the minimum potential difference needed to reduce Al_2O_3 at 500°C . The free energy change for the decomposition reaction :



Ans. $\frac{2}{3}\text{Al}_2\text{O}_3 \rightarrow \frac{4}{3}\text{Al} + \text{O}_2$

$$n = \frac{6 \times 2}{3} = 4e^-$$

$$\Delta G = -nFE$$

$$\Delta G = 960 \times 10^3 \text{ J, } n = 4, F = 96500 \text{ C mol}^{-1}$$

$$960 \times 10^3 = -4 \times 96500 \times E$$

$$E = -2.487 \text{ V}$$

Minimum potential difference needed to reduce $\text{Al}_2\text{O}_3 = -2.487 \text{ V}$.

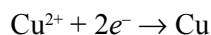
Q. 9. Two electrolytic cells containing silver nitrate solution and copper sulphate solution are connected in series. A steady current of 2.5 amp was passed through them till 1.078 g of Ag were deposited. How long did the current flow ? What weight of copper will be deposited ? (Ag = 107.8 u, Cu = 63.5 u)

Ans.

$$w = z \times i \times t$$

$$t = \frac{w}{z \times i}$$

$$t = \frac{1.078 \times 1 \times 96500}{107.8 \times 2.5} = 386 \text{ seconds}$$



$$w = \frac{63.5}{2 \times 96500} \times 2.5 \times 386 = 0.3175 \text{ gram}$$

Q.10. A solution of $\text{Ni}(\text{NO}_3)_2$ is electrolysed between platinum electrodes using a current of 5.0 amp for 20 minutes. What mass of the nickel will be deposited at the cathode ? (Ni = 58.7 u)

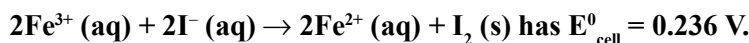
Ans.

$$w = z \times i \times t$$

$$z = \frac{58.7}{2 \times 96500}$$

$$w = 1.825 \text{ gram}$$

Q.11. The cell in which the following reaction occurs :



Calculate the standard Gibbs energy and the equilibrium constant of the cell reaction.

Ans.

$$n = 2$$

$$\Delta G^{\circ} = -nFE_{\text{cell}}^0 = -2 \times 96500 \times 0.236 \text{ J} = -45.55 \text{ kJ/mol}$$

$$\Delta G^{\circ} = -2.303 RT \log K_c$$

$$\log K_c = \frac{\Delta G^{\circ}}{-2.303RT} = \frac{45.55 \times 10^3}{2.303 \times 8.314 \times 298} = 7.983$$

$$K_c = \text{antilog}(7.983) = 9.616 \times 10^7$$

Q.12. The molar conductivity of 0.025 mol L^{-1} methanoic acid is $46.1 \text{ S cm}^2 \text{ mol}^{-1}$. Calculate its degree of dissociation and dissociation constant. Given $\Lambda^{\circ} (\text{H}^+) = 349.6 \text{ S cm}^2 \text{ mol}^{-1}$, $\Lambda^{\circ} (\text{HCOO}^-) = 54.6 \text{ S cm}^2 \text{ mol}^{-1}$.

Ans. $\Lambda_m^\circ(\text{HCOOH}) = \Lambda_m^\circ(\text{H}^+) + \Lambda_m^\circ(\text{HCOO}^-)$
 $= 349.6 + 54.6 \text{ S cm}^2 \text{ mol}^{-1} = 404.2 \text{ S cm}^2 \text{ mol}^{-1}$

$$\Lambda_m^\circ = 46.1 \text{ S cm}^2 \text{ mol}^{-1}$$



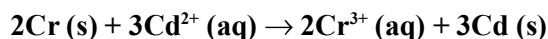
$$\alpha = \frac{\Lambda_m^c}{\Lambda_m^\circ} = \frac{46.1}{404.2} = 0.114$$

Initial conc.	$C \text{ mol L}^{-1}$	0	0
At equil.	$C(1 - \alpha)$	$C\alpha$	$C\alpha$

$$K_a = \frac{C\alpha^2}{1 - \alpha} = \frac{0.025 \times (0.114)^2}{1 - 0.114}$$

$$= 3.67 \times 10^{-4}$$

Q.13. Calculate the standard cell potentials of galvanic cells in which the following reaction take place :



Also calculate ΔG° and equilibrium constant of the reaction.

Ans. $E_{\text{cell}}^0 = E_{\text{cathode}}^0 - E_{\text{anode}}^0$
 $= -0.40 - (-0.74) = 0.34 \text{ V}$
 $\Delta G^\circ = -nFE_{\text{cell}}^0 = -6 \times 96500 \times 0.34 = -196860$
 $= -196860 \text{ J mol}^{-1} = -196.86 \text{ kJ/mol}$

$$-\Delta G^\circ = 2.303 RT \log K_c$$

$$196860 = 2.303 \times 8.314 \times 298 \log K_c$$

Or $\log K_c = 34.5014$

$$K_c = \text{antilog } 34.5014 = 3.192 \times 10^{34}$$

Q.14. Calculate the potential of the following cell $\text{Sn}^{4+} (1.5 \text{ M}) + \text{Zn} \rightarrow \text{Sn}^{2+} (0.5 \text{ M}) + \text{Zn}^{2+} (2\text{M})$.

Given : $E_{\text{Sn}^{4+}/\text{Sn}^{2+}}^0 = 0.13\text{V}$, $E_{\text{Zn}^{2+}/\text{Zn}}^0 = -0.76\text{V}$

Will the cell potential \uparrow or \downarrow if the concentration of Sn^{4+} is increased ?

Ans.
$$E_{\text{cell}} = E_{\text{cell}}^0 - \frac{0.0591}{n} \log \frac{[\text{Sn}^{2+}][\text{Zn}^{2+}]}{[\text{Sn}^{4+}][\text{Zn}]}$$

$$= 0.89 - \frac{0.0591}{2} \log \frac{0.5 \times 2}{1.5 \times 1}$$

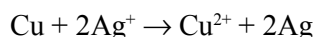
$$= 0.89 - \frac{0.0591}{2} \log \frac{1}{1.5}$$

$$= 0.895 \text{ V}$$

On increasing the concentration of Sn^{4+} , EMF of the cell will increase.

Q.15. $E^\circ (\text{Cu}^{2+}/\text{Cu})$ and $E^\circ (\text{Ag}^+/\text{Ag})$ is + 0.337 V and + 0.799 V respectively. Make a cell whose EMF is +ve. If the concentration of Cu^{2+} is 0.01M and E_{cell} at 25°C is zero, calculate the concentration of Ag^+ .

Ans. Cu is more reactive than silver, so that the cell is as $\text{Cu}/\text{Cu}^{2+} (0.01\text{M}) \parallel \text{Ag}^+ (\text{C})/\text{Ag}$ or cell reaction

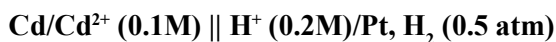


$$E_{\text{cell}} = E^\circ_{\text{cell}} - \frac{0.0591}{n} \log \frac{[\text{Cu}^{2+}][\text{Ag}]^2}{[\text{Cu}][\text{Ag}^+]^2}$$

$$= E^\circ_{\text{cell}} - \frac{0.0591}{n} \log \frac{(0.01) \times 1^2}{1 \times [\text{Ag}^+]^2}$$

Or $[\text{Ag}^+] = 1.47 \times 10^{-9} \text{ M}$

Q.16. Calculate the potential of the cell at 298 K :



Given E° for $\text{Cd}^{2+}/\text{Cd} = -0.403 \text{ V}$, $R = 8.314 \text{ J}^{-1} \text{ mol}^{-1}$, $F = 96500 \text{ C mol}^{-1}$.

Ans. The cell reaction is $\text{Cd} + 2\text{H}^+ (0.2\text{M}) \rightarrow \text{Cd}^{2+} (0.1\text{M}) + \text{H}_2 (0.5 \text{ atm})$

$$E^\circ_{\text{cell}} = 0 - (-0.403) = +0.403 \text{ V}$$

$$E_{\text{cell}} = 0.403 - \frac{2.303RT}{nF} \log \frac{[\text{Cd}^{2+}] \times P_{\text{H}_2}}{[\text{Cd}][\text{H}^+]^2}$$

$$= 0.403 - \frac{2.303 \times 8.314 \times 298}{2 \times 96500} \log \frac{0.1 \times 0.5}{(0.2)^2}$$

$$E_{\text{cell}} = 0.403 - 0.003 = 0.40 \text{ V}$$

Q.17. The electrical resistance of a column of 0.05M NaOH solution of diameter 1 cm and length 50 cm is $5.55 \times 10^3 \text{ ohm}$. Calculate its resistivity, conductivity and molar conductivity.

Ans. Diameter = 1 cm, radius = 0.5 cm

$$\text{Area} = \pi r^2 = 3.14 \times (0.5)^2 = 0.785 \text{ cm}^2$$

$$\rho = \frac{R \times A}{l} = \frac{5.55 \times 10^3 \times 0.785}{50}$$

$$= 87.135 \text{ ohm cm}$$

$$\text{Conductivity (k)} = \frac{1}{\rho} = \frac{1}{87.135} = 0.01148 \text{ ohm}^{-1} \text{ cm}^{-1}$$

$$= 0.01148 \text{ ohm cm}$$

$$\text{Molar conductivity } \Lambda_m^c = \frac{K \times 1000}{M} = \frac{0.01148 \times 1000}{0.05}$$

Q.18. The measured resistance of a conductance cell containing $7.5 \times 10^{-3} \text{ M}$ solution of KCl at 25°C was 1005 ohms. Calculate (a) specific conductance, (b) molar conductance of the solution.

Ans. $1.247 \times 10^{-3} \text{ S cm}^{-1}$, $165.83 \text{ S cm}^2 \text{ mol}^{-1}$

Q.19. Conductivity of saturated solution of BaSO_4 at 315 K is $3.648 \times 10^{-6} \text{ ohm}^{-1} \text{ cm}^{-1}$ and that of water is $1.25 \times 10^{-6} \text{ ohm}^{-1} \text{ cm}^{-1}$. Ionic conductance of Ba^{2+} and SO_4^{2-} are 110 and $136.6 \text{ ohm}^{-1} \text{ cm}^2 \text{ mol}^{-1}$ respectively. Calculate the solubility of BaSO_4 in g/L.

Ans. $\Lambda_m^{\circ}(\text{BaSO}_4) = \Lambda_m^{\circ} \text{Ba}^{2+} + \Lambda_m^{\circ} \text{SO}_4^{2-} = 110 + 136.6 = 246.6 \text{ ohm}^{-1} \text{ cm}^{-1}$

$$\begin{aligned} K_{\text{BaSO}_4} &= K_{\text{BaSO}_4}(\text{solution}) - K_{\text{water}} = 3.648 \times 10^{-6} - 1.25 \times 10^{-6} \\ &= 2.398 \times 10^{-6} \text{ S cm}^{-1} \end{aligned}$$

$$\Lambda_m^c = \frac{K \times 1000}{\text{Solubility}} = \frac{2.398 \times 10^{-6} \times 1000}{246.6} = 9.72 \times 10^{-6} \text{ mol/L}$$

$$= 9.72 \times 10^{-6} \times 233 = 2.26 \times 10^{-3} \text{ g/L}$$

LONG ANSWER TYPE QUESTIONS (5 Marks)

Q. 1. Conductivity of 0.00241M acetic acid is $7.896 \times 10^{-5} \text{ S cm}^{-1}$. Calculate its molar conductivity and if Λ_m° for acetic acid is $390.5 \text{ S cm}^2 \text{ mol}^{-1}$, what is its dissociation constant ?

Ans.

$$\begin{aligned} \Lambda_m^{\circ} &= \frac{k \times 1000}{M} \\ &= \frac{7.896 \times 10^{-5} \text{ S cm}^{-1} \times 1000 \text{ cm}^3 \text{ L}^{-1}}{0.00241 \text{ mol L}^{-1}} \\ &= 32.76 \text{ S cm}^2 \text{ mol}^{-1} \end{aligned}$$

$$\alpha = \frac{\Lambda_m}{\Lambda_m^\circ} = \frac{32.76}{390.5} = 8.39 \times 10^{-2}$$

$$\begin{aligned} K_a &= \frac{C\alpha^2}{1-\alpha} = \frac{0.00241 \times (8.39 \times 10^{-2})^2}{1 - 8.39 \times 10^{-2}} \\ &= 1.86 \times 10^{-5} \end{aligned}$$

Q. 2. Three electrolytic cells A, B, C containing solution of ZnSO_4 , AgNO_3 and CuSO_4 respectively all connected in series. A steady current of 1.5 amperes was passed through them until 1.45 g of silver deposited at the cathode of cell B. How long did the current flow? What mass of copper and of zinc were deposited?

Ans. $\text{Ag}^+ + e^- \rightarrow \text{Ag (s)}$

108 g of silver is deposited by 96500 C.

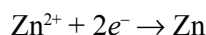
$$\begin{aligned} 1.45 \text{ g silver is deposited by} &= \frac{96500 \times 1.45}{108} \\ &= 1295.6 \text{ C} \end{aligned}$$

$$Q = I \times t$$

$$1295.6 = 1.5 \times t$$

$$t = \frac{1295.6}{1.5} = 863 \text{ s}$$

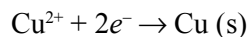
In cell A, the electrode reaction is



2F of electricity deposit Zn = 65.3 g

$$\begin{aligned} 1295.6 \text{ of electricity deposit Zn} &= \frac{65.3 \times 1295.6}{2 \times 96500} \\ &= 0.438 \text{ g} \end{aligned}$$

In cell C, the electrode reaction is



2F of electricity deposit Cu = 63.5 g

$$\begin{aligned} 1295.6 \text{ of electricity deposit Cu} &= \frac{63.5 \times 1295.6}{2 \times 96500} \\ &= 0.426 \text{ g} \end{aligned}$$

Q. 3. (a) Define Kohlraush's law.

(b) Suggest a way to determine the Λ_m° for CH_3COOH .

(c) The Λ_m° for sodium acetate, HCl, NaCl are 91.0, 425.9 and 126.4 $\text{S cm}^2 \text{mol}^{-1}$ respectively at 298 K. Calculate Λ_m° for CH_3COOH .

Ans. (a) The molar conductivity at a infinite dilution for a given salt can be expressed as the sum of the individual contribution from the ions of electrolyte.

$$\begin{aligned} E &= 0.36 - \frac{0.059}{2} \log \frac{0.004}{0.2} \\ &= 0.36 - \frac{0.059}{2} \log 2 \times 10^{-3} \\ &= 0.36 - \frac{0.059}{2} (-2.6990) \\ &= 0.36 + 0.08 = 0.44 \text{ V} \end{aligned}$$

(b) $\Lambda^\circ \text{CH}_3\text{COOH} = ?$

$$\begin{aligned} \Lambda^\circ \text{CH}_3\text{COO}^- + \Lambda^\circ \text{H}^+ &= \Lambda^\circ \text{CH}_3\text{COO}^- + \Lambda^\circ \text{Na}^+ + \Lambda^\circ \text{H}^+ \\ &\quad + \Lambda^\circ \text{Cl}^- - \Lambda^\circ \text{Na}^+ - \Lambda^\circ \text{Cl}^- \quad \dots(i) \end{aligned}$$

$$\Lambda_m^\circ \text{CH}_3\text{COOH} = \Lambda^\circ \text{CH}_3\text{COONa} + \Lambda^\circ \text{HCl} - \Lambda^\circ \text{NaCl}$$

$$\begin{aligned} \text{(c)} \quad \Lambda_m^\circ \text{CH}_3\text{COOH} &= \Lambda^\circ \text{CH}_3\text{COONa} + \Lambda^\circ \text{HCl} - \Lambda^\circ \text{NaCl} \\ &= 91.0 + 425.9 - 126.4 \\ &= 390.5 \text{ S cm}^2 \text{mol}^{-1} \end{aligned}$$

Q. 4. (a) Define weak and strong electrolytes.

(b) The E° values corresponding to the following two reduction electrode processes are :

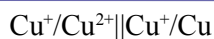
$$\text{(i) } \text{Cu}^+/\text{Cu} = 0.52 \text{ V} \qquad \text{(ii) } \text{Cu}^{2+}/\text{Cu}^+ = 0.16 \text{ V}$$

Formulate the galvanic cell for their combination. Calculate the cell potential and ΔG° for the cell reaction.

Ans. (a) Weak electrolyte : The substance which partially ionized in solution is known as weak electrolyte. Example : NH_4OH .

Strong electrolyte : The substance which completely ionized in solution is known as strong electrolyte. Example : NaCl .

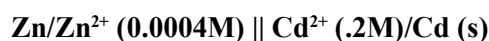




$$E_{\text{cell}}^{\circ} = 0.52 - 0.16 = 0.36 \text{ V}$$

$$\begin{aligned} \Delta G^{\circ} &= -nFE_{\text{cell}}^{\circ} \\ &= -1 \times 96500 \times 0.36 \\ &= -34740 \text{ J mol}^{-1} \end{aligned}$$

- Q. 5. (a) Give anode and cathode reaction of mercury cell.**
(b) Calculate emf of the cell for the cell reaction at 25°C for the cell :



$$\text{Given : } E_{\text{cell}}^{\circ} = 0.36 \text{ V}$$

- Ans. (a)** At anode : $\text{Zn} + 2\text{OH}^- \rightarrow \text{ZnO} + 2e^- + \text{H}_2\text{O}$
 At cathode : $\text{HgO} (s) + \text{H}_2\text{O} + 2e^- \rightarrow \text{Hg} (l) + 2\text{OH}^-$
(b) $\text{Zn} + \text{Cd}^{2+} \rightarrow \text{Zn}^{2+} + \text{Cd}$

$$n = 2$$

According to Nernst equation :

$$E_{\text{cell}} = E_{\text{cell}}^{\circ} - \frac{0.059}{n} \log \frac{[\text{Zn}^{2+}]}{[\text{Cd}^{2+}]}$$

VALUE BASED QUESTIONS (4 Marks)

- Q. 1.** People are advised to limit the use of fossil fuels resulting in Green House Effect leading to a global rise in temperature of earth. Hydrogen provides an ideal alternative in fuel cells.
- Write electrode reactions in H_2 - O_2 fuel cells.
 - Can we use CH_4 in place of H_2 ? If yes, then write the electrode reaction at anode.
 - How is green house effect reduced by the use of fuel cells ?
 - Write the values associated with preference to fuel cells.
- Q. 2.** In Apollo space programs, H_2 - O_2 fuel cell was used.
- Explain why fuel cell is preferred in space programme.
 - Mention the values associated with the decision of using fuel cells.
 - Can we use the fuel cells in automobiles ?
 - How can we increase efficiency of fuel cells ?

- Q. 3.** Ira, a student of science, went with her father to buy a battery for their inverter and camera. They found two types of batteries, one a lead storage and other a Ni-Cd storage battery. Later was more expensive but lighter in weight. Ira insisted to purchase costlier Ni-Cd battery.
- In your opinion, why Ira insisted for Ni-Cd battery ? Give reasons.
 - Write the values associated with above decision.
 - Write overall cell reaction during the discharge.
 - Can this cell be sealed unlike lead storage cell ?
- Q. 4.** Shyam bought a dry cell which was very old. He puts it in torch. The torch did not glow. He found that the cell was dead.
- Why did this happen ?
 - Write the overall cell reaction during discharge.
 - What value did you derive from it ?
 - Why is dry cell not rechargeable ?
- Q. 5.** Sakshi, a student of Chemistry of class XII, found that some kitchenwares made of iron or copper were galvanized. Sakshi told her mother not to use these cookwares and advised her mother to get them plated with tin instead of zinc.
- Why Sakshi was against using the cookwares plated with zinc ?
 - What would happen if cookwares plated with zinc were used in kitchen ?
 - Can the cookwares be plated with tin ?
 - What values are associated with the advice of Sakshi ?
 - What would happen if the tin plating on cookwares made of copper or iron is broken ?



UNIT 4

CHEMICAL KINETICS

CONCEPT

Chemical Kinetics : The branch of physical chemistry which deals with the study of rate of reaction and factors affecting rate.

Rate of chemical reaction : The change in concentration of any reactant or product per unit time is called rate of reaction.

Types of Rate of Reaction :

1. **Average rate of reaction :** The rate of reaction measured over the long time interval is called average rate of reaction.

$$\text{Avg rate } \Delta x/\Delta t = -\Delta[R]/\Delta t = +\Delta [p]/\Delta t$$

2. **Instantaneous rate of reaction :** The rate of reaction measured at a particular time is called instantaneous rate of reaction.

$$(\text{Rate})_i = (\text{Instantaneous rate}) \, dx/dt = -d[R]/dt = +d[P]/dt$$

Factors affecting Rate of Reaction

1. Concentration of reactant
2. Surface area
3. Temperature
4. Nature of reactant
5. Presence of catalyst
6. Radiation in photochemical reaction

Rate constant (k) : It is equal to the rate of reaction when molecular concentration of reactant is at unity.

Rate law : The rate of reaction is directly proportional to the product of concentration of reactant and each concentration is raised to some power which may or may not be equal to stoichiometry experimentally.



$$\text{Rate law} = k[A]^p[B]^q$$

where powers p and q are determined experimentally.

Molecularity : The total number of reactants taking part in elementary chemical reaction is called molecularity.

Order of reaction : The sum of powers to which the concentration terms are raised in a rate law expression is called order of reaction.

For above case, Order = P + Q

Orders of reaction is determined experimentally.

Half-life period : The time during which the concentration of the reactant is reduced to half of its initial concentration is called half-life period.

Activation energy : The minimum extra amount of energy absorbed by reactant molecules so that their energy becomes equal to the threshold energy is called activation energy.

$$\text{Activation energy} = \text{Threshold energy} - \text{Kinetic energy}$$

Temperature coefficient : The ratio of rate constant at two temperatures having difference of 10°C is called temperature coefficient.

$$\text{Temperature coefficient} = \frac{\text{Rate constant at } T + 10^\circ\text{C}}{\text{Rate constant at } T^\circ\text{C}}$$

Arrhenius Equation :

$$K = Ae^{-E_a/RT}$$

where, K = Rate constant

A = Arrhenius energy (Frequency factor or pre-exponential factor)

E_a = Activation energy

R = Rate constant

T = Temperature

$$\frac{E_a}{RT} = \text{Fraction of molecules having energy equal to or more than activation energy}$$

$$\text{Log } K = \text{Log } A - \frac{E_a}{2.303RT}$$

$$\text{Log } \frac{K_2}{K_1} = \frac{E_a}{2.303R} \left[\frac{1}{T_1} - \frac{1}{T_2} \right]$$

Energy of activation can be evaluated as :

$$\text{Log}[K_2/K_1] = E_a (1/T_1 - 1/T_2) / 2.303RT$$

$$\text{Log}[K_2/K_1] = E_a(1/T_1 - 1/T_2) / 19.15$$

1. Integrated rate law equation for zero order reaction is given as below :

$$(a) \quad k = \frac{[R]_0 - [R]_t}{t}$$

Where k is rate constant and $[R]_0$ is initial molar concentration.

$$(b) \quad t_{1/2} = \frac{[R]_0}{2k} \quad t_{1/2} \text{ is half-life period of zero order reaction.}$$

2. Integrated rate law equation for first order reaction :

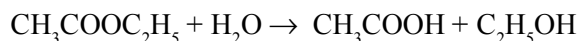
$$(a) \quad k = \frac{2.303}{t} \log \frac{[R]_0}{[R]_t}$$

where k is rate constant, $[R]_0$ is initial molar concentration and $[R]$ is final concentration at time ' t '.

(b) Half-life period ($t_{1/2}$) for first order reaction :

$$t_{1/2} = \frac{0.693}{k}$$

Pseudo chemical reaction : The chemical reaction which looks like higher order reaction but in real it follows lower order reaction.

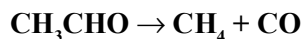


$$\text{Rate} = k[\text{CH}_3\text{COOC}_2\text{H}_5]^1$$

Order = 1

VERY SHORT ANSWER TYPE QUESTIONS (1 Mark)

Q. 1. The gas phase decomposition of acetaldehyde



follows the rate law, $\text{Rate} = k(P_{\text{CH}_3\text{CHO}})^{3/2}$, unit of P is atm and time is second.

What are the units of its rate constant ?

Ans. $\text{Atm}^{-1/2} \text{sec}^{-1}$

Q. 2. State the order with respect to each reactant and overall reaction.

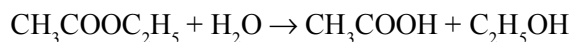


$$\text{Rate} = k[\text{H}_2\text{O}_2]^1[\text{I}^-]^1$$

Ans. Order of reaction = 1 + 1 = 2

Q. 3. Give one example of pseudo first order reaction.

Ans. Hydrolysis of an ester :



Q. 4. The rate law for a reaction is

$$\text{Rate} = K [\text{A}] [\text{B}]^{3/2}$$

Can the reaction be an elementary process ? Explain.

Ans. No, an elementary process would have a rate law with orders equal to its molecularities and therefore must be in integral form.

Q. 5. For the reaction $3\text{H}_2 + \text{N}_2 \rightarrow 2\text{NH}_3$, how are the rate of reaction expressions

$-\frac{d[\text{H}_2]}{dt}$ and $\frac{d[\text{NH}_3]}{dt}$ inter-related ?

Ans.
$$-\frac{1}{3} \frac{d[\text{H}_2]}{dt} = \frac{1}{2} \frac{d[\text{NH}_3]}{dt}$$

Q. 6. Identify the order of a reaction from the following rate constant :

$$k = 2.3 \times 10^{-5} \text{ L mol}^{-1} \text{ s}^{-1}$$

Ans. Second order

Q. 7. After five half-life periods for a first order reaction, what fraction of reactant remains ?

Ans. $\frac{1}{32}$

Q. 8. Give the damaging effect of photochemistry.

Ans. The colour of fabrics fades away on exposure to sunlight.

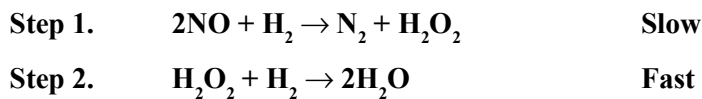
Q. 9. What is the effect of adding catalyst on the free energy of a reaction ?

Ans. No change in ΔG .

Q.10. What value of k is predicted for the rate constant by Arrhenius equation is $T \rightarrow \infty$? Is this value physically reasonable ?

Ans. From the equation $k = A e^{-E_a/RT}$ if $T \rightarrow \infty$ $k \rightarrow A$ so that $E_a = 0$. This is not feasible.

Q.11. Determine the order of reaction :



Ans. Rate = $k [\text{NO}]^2 [\text{H}_2]$
 Order = 2 + 1
 = 3

Q.12. What is the order of reaction whose rate constant has the same units as the rate of reaction ?

Ans. Zero order

Q.13. Why are reactions of higher order less in number ?

Ans. A reaction takes place due to collide of molecules. The chances for a large number of molecules or ions to collide simultaneously are less. Hence, the reactions of higher order are less.

Q.14. What will be the effect of temperature on rate constant ?

Ans. Rate constant of a reaction is nearly doubled with rise in temperature by 10° .

Q.15. State a condition under which a bimolecular reaction is kinetically first order reaction.

Ans. A bimolecular reaction becomes first order reaction when one of the reactants is in excess.

Q.16. Why can't molecularity of any reaction be equal to zero ?

Ans. Molecularity of a reaction means the number of molecules of the reactants taking place in an elementary reaction. Since at least one molecule must be present, so that molecularity will be atleast one.

Q.17. Give an example of zero order reaction.

Ans. $\text{H}_2 + \text{Cl}_2 \xrightarrow{h\nu} 2\text{HCl}$ or any other example

Q.18. The rate constant of a reaction is $3 \times 10^2 \text{ min}^{-1}$. What is its order of reaction ? (On the basis of units of rate constant)

Ans. First order reaction.

Q.19. Three-fourth of a reaction is completed in 32 minutes. What is the half life period of this reaction ?

Ans. 16 minutes.

Q.20. What is meant by an elementary reaction ?

Ans. A reaction which takes place in one step is called an elementary reaction. For example : $\text{H}_2 + \text{I}_2 \rightarrow 2\text{HI}$.

Q.21. Give one example of a reaction where order and molecularity are equal ?

Ans. $2\text{HI} \rightarrow \text{H}_2 + \text{I}_2$ (Order = Molecularity = 2)

Q.22. For a reaction $R \rightarrow P$, the rate becomes 2 times when the concentration of the reactant A is increased 4 times. What is the order of reaction ?

Ans. $r = k(a)^n \Rightarrow 2r = k(4a)^n \Rightarrow 2 = 4^n \Rightarrow n = 0.5$

Q.23. The rate constant of a zero order reaction in A is $0.003 \text{ mol L}^{-1} \text{ sec}^{-1}$. How long will it take for the initial concentration of A to fall from 0.10M to 0.075 M ?

Ans. $t = \frac{[A]_0 - [A]}{k} = \frac{0.10 - 0.075}{0.003} = 8.3 \text{ sec}$

Q.24. In a reaction $2A \rightarrow \text{Products}$, the concentration of A decreases from 0.5 mol L^{-1} in 10 minutes. Calculate the rate during this interval.

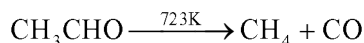
Ans. Average rate = $\frac{-\Delta[A]}{2\Delta t} = -\frac{1}{2} \left(\frac{0.4 - 0.5}{10} \right) = 5 \times 10^{-3} \text{ M min}^{-1}$

Q.25. In some cases large number of colliding reactant molecules have energy more than threshold energy even then the reaction is slow. Why ?

Ans. Because resultant molecules do not collide in proper orientation.

Q.26. Give an example of a reaction having fractional order.

Ans. Decomposition of acetaldehyde (order = 1.5).



Q.27. Decomposition reaction of ammonia on 1t surface has rate constant = $2.5 \times 10^{-1} \text{ mol L}^{-1} \text{ sec}^{-1}$. What is order of reaction ?

Ans. Unit of k explain that it is zero order reaction.

Q.28. What is order of radioactive decay ?

Ans. First order

Q.29. For a reaction $A + B \rightarrow \text{Product}$, the rate law is given by $r = k[A]^{1/2} [B]^2$. What is the order of the reaction ?

Ans. Order of reaction = $\frac{1}{2} + 2 = 2.5$

SHORT ANSWER-I TYPE QUESTIONS (2 Marks)

Q. 1. The rate of a particular reaction quadruples when the temperature changes from 293 K to 313 K . Calculate activation energy.

Ans. $K_2/K_1 = 4$

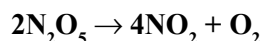
$$T_1 = 293 \text{ K}, T_2 = 313 \text{ K}$$

$$\log \frac{K_2}{K_1} = -\frac{E_a}{2.303R} \left[\frac{1}{T_2} - \frac{1}{T_1} \right]$$

Thus, on calculating and substituting values, we get :

$$E_a = 52.86 \text{ KJ mol}^{-1}$$

Q. 2. If the decomposition of nitrogen oxide as



follows a first order kinetics.

(a) Calculate the rate constant for a 0.05M solution if the instantaneous rate is $1.5 \times 10^{-6} \text{ mol/l/s}$?

Ans.

$$\begin{aligned} \text{Rate} &= K[\text{N}_2\text{O}_5] \\ K &= \frac{\text{Rate}}{[\text{N}_2\text{O}_5]} \\ &= \frac{1.5 \times 10^{-6}}{0.05} \\ K &= 3.0 \times 10^{-5} \end{aligned}$$

(b) What concentration of N_2O_5 would give a rate of $2.45 \times 10^{-5} \text{ mol L}^{-1} \text{ s}^{-1}$?

Ans.

$$\text{Rate} = 2.45 \times 10^{-5} \text{ mol L}^{-1} \text{ s}^{-1}$$

$$\begin{aligned} [\text{N}_2\text{O}_5] &= \frac{\text{Rate}}{K} = \frac{2.45 \times 10^{-5}}{3.0 \times 10^{-5}} \\ &= 0.82 \text{ M} \end{aligned}$$

Q. 3. Write the difference between order and molecularity of reaction.

Ans.

Order	Molecularity
1. It is the sum of the powers of concentration terms in the rate law expression.	It is the number of reacting species undergoing simultaneously collision in a reaction.
2. It is determined experimentally.	2. It is a theoretical concept.
3. Order of reaction need not to be a whole number.	3. It is whole number only.
4. Order of reaction can be zero.	4. It can't be zero or fractional.

Q. 4. The rate constant for a reaction of zero order A is $0.0030 \text{ mol L}^{-1} \text{ s}^{-1}$. How long will it take for the initial conc. of A to fall from 0.10M to 0.075M ?

Ans. For a zero order reaction,

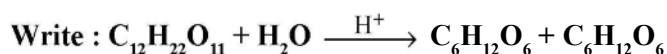
$$K = 0.0030 \text{ mol L}^{-1} \text{ s}^{-1}$$

$$[A]_0 = 0.10\text{M} \quad [A] = 0.075\text{M}$$

$$K = \frac{[A]_0 - [A]}{t}$$

$$t = \frac{0.10 - 0.075}{0.0030} = 8.33 \text{ s}$$

Q. 5. For the reaction :



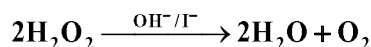
(a) Rate of reaction expression.

(b) Molecularity

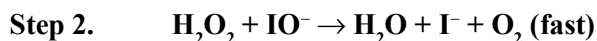
$$\begin{aligned} \text{Ans. (a) Rate} &= -\frac{d[\text{C}_{12}\text{H}_{22}\text{O}_{11}]}{dt} = -\frac{d(\text{H}_2\text{O})}{dt} \\ &= \frac{d[\text{C}_6\text{H}_{12}\text{O}_6]}{dt} = \frac{d[\text{C}_6\text{H}_{12}\text{O}_6]}{dt} \end{aligned}$$

(b) Molecularity = 2

Q. 6. Consider the decomposition reaction :



This reaction takes place in two steps as given below :



(a) Determine rate law expression.

(b) Determine the order of reaction.

Ans. (a) Rate = $K[\text{H}_2\text{O}_2][\text{I}^-]$ because second step is rate determining step.

(b) Order = $1 + 1 = 2$

Q. 7. The decomposition of hydrocarbon follows the equation $K = (4.5 \times 10^{11} \text{ s}^{-1}) e^{-28000\text{k}/T}$. Calculate E_a .

Ans. $K = (4.5 \times 10^{11} \text{ s}^{-1}) e^{-28000\text{k}/T}$

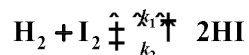
Comparing the equation with Arrhenius equation,

$$K = Ae^{-E_a/RT}$$

$$-\frac{E_a}{R} = -28000 \text{ K}$$

$$E_a = 28000 \times 8.314 \\ = 232192 \text{ J mol}^{-1}$$

Q. 8. For a reversible reaction,



derive an expression for the formation of HI.

Ans. Rate of reaction $= \frac{1}{2} \frac{d[\text{HI}]}{dt}$

$$= k_1[\text{H}_2][\text{I}_2] - 2k_2[\text{HI}]^2$$

$$\text{Rate of formation of HI} = 2k_1[\text{H}_2][\text{I}_2] - 2k_2[\text{HI}]^2$$

Q. 9. A reaction is of second order with respect to a reactant. How is the rate of reaction affected if the conc. of the reactant is reduced to half. What is the unit of rate constant for such a reaction ?

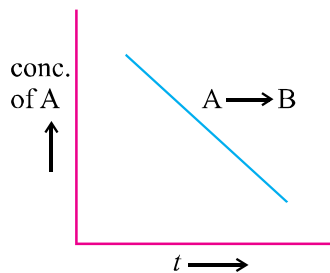
Ans. Rate $= k[\text{A}]^2$

$$\text{Unit of } k = \frac{\text{mol L}^{-1}}{\text{S}} = k(\text{mol}^{-1})^2 \\ k = \text{mol}^{-1} \text{ L S}^{-1}$$

Q.10. For a first order reaction time taken for half of the reaction to complete is t_1 and $3/4$ of the reaction to complete is t_2 . How are t_1 and t_2 related ?

Ans. $t_2 = 2t_1$ because for $3/4$ th of the reaction to complete time required is equal to two half lives.

Q. 11.



(a) What is the order of the reaction ?

(b) What is the slope of the curve ?

Ans. (a) Zero order reaction.

$$(b) [R] = [R_0] - kt$$

$$\therefore \text{Slope} = -k$$

Q.12. Derive an expression to calculate time required for completion of zero order reaction.

Ans. For a zero order reaction,

$$R = [R]_0 - kt$$

For completion of the reaction $[R] = 0$

$$\therefore kt = [R]_0$$

$$\text{Or } t = \frac{[R]_0}{k}$$

Q.13. For the reaction $N_2(g) + 3H_2(g) \rightarrow 2NH_3(g)$

How is the rate of formation of ammonia related to the rate of disappearance of H_2 ?

$$\text{Ans. Rate of reaction} = -\frac{1}{3} \frac{\Delta[H_2]}{\Delta t} = \frac{1}{2} \frac{\Delta[NH_3]}{\Delta t}$$

$$\text{Or } \frac{\Delta[NH_3]}{\Delta t} = -\frac{2}{3} \frac{\Delta[H_2]}{\Delta t}$$

Q.14. The rate of a gaseous reaction becomes half when volume of the vessel is doubled. What is the order of reaction ?

Ans. Suppose, order of reaction is n and the reaction is $A(g) \rightarrow \text{Products}$

$$\text{Rate} = k[A]^n \quad \dots(i)$$

When volume is doubled, molar conc. becomes half and rate of reaction gets halved.

$$\frac{\text{Rate}}{2} = k \left(\frac{A}{2} \right)^n \quad \dots(ii)$$

Dividing equation (i) by equation (ii),

$$(2)^1 = (2)^n$$

Or $n = 1$

Q.15. A reaction which is first order with respect to A has rate constant 6 min^{-1} . If we start with $[A] = 0.5 \text{ mol L}^{-1}$, when would $[A]$ reach the value of 0.05 ML^{-1} ?

Ans. $k = \frac{2.303}{t} \log \frac{[A]_0}{[A]}$

$$k = 6 \text{ min}^{-1}, [A]_0 = 0.5, [A] = 0.05, t = ?$$

$$t = \frac{2.303}{6} \log \frac{0.5}{0.05} = \frac{2.303}{6} \log 10 = 0.3838 \text{ min}$$

Q.16. The conversion of the molecules X to Y follows second order kinetics. If the concentration of X is increased to three times, how will it affect the rate of formation of Y ?

Ans. 9 times

Q.17. A first order reaction has a rate constant $1.15 \times 10^{-3} \text{ s}^{-1}$. How long will 5 gram of this reactant take to reduce to 3 grams ?

Ans. $t = 444$ seconds

Q.18. $4\text{NH}_3 + 5\text{O}_2 \rightarrow 4\text{NO} + 6\text{H}_2\text{O}$. If rate of formation of NO is $6 \times 10^{-4} \text{ atm min}^{-1}$, calculate the rate of formation of H_2O .

Ans. $9.0 \times 10^{-4} \text{ atm min}^{-1}$

Q.19. A first order reaction is 75% completed in 60 min. Find the half life of this reaction.

Ans. 30 mins.

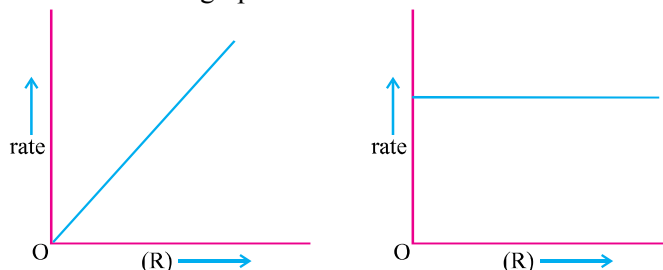
Q.20. The composition of a hydrocarbon follows the equation $K = (4.5 \times 10^{11} \text{ sec}^{-1}) e^{-28000\text{K}/T}$. Calculate the value of E_a .

Ans. 232.79 kJ/mol

Q.21. Consider a certain reaction $A \rightarrow \text{Product}$ with $K = 2.0 \times 10^{-2} \text{ s}^{-1}$. Calculate the concentration of A remaining after 100 s, if the initial concentration of A is 1.0 mol L^{-1} .

Ans. $[A] = 0.135 \text{ M}$

Q.22. Explain with an example, what is a pseudo first order reaction ? The graphs (A and B) given below are plots of rate of reaction Vs concentration of the reactant. Predict the order from the graphs.



Q.23. Differentiate between :

- Average rate and instantaneous rate of a chemical reaction.
- Molecularity and order of reaction.

Q.24. Show that in case of first order reaction, the time required for 99.9% of the reaction to take place is about ten times than that required for half the reaction.

Q.25. For the reaction $\text{NO}_2 + \text{CO} \rightarrow \text{CO}_2 + \text{NO}$, the experimentally determined rate expression below 400 K is $\text{rate} = k[\text{NO}_2]^2$. What mechanism can be proposed for this reaction ?

Q.26. The half life period of a first order reaction is 60 min. What % will be left after 240 mins. ?

Ans. 6.25%

Q.27. Time for half change for a first order reaction is 25 min. What time will be required for 99% reaction ?

Ans. 166.16 mins.

SHORT ANSWER TYPE-II QUESTIONS

Q. 1. The rate constant for first order reaction is 60/s. How much time will it take to reduce the concentration of the reaction to 1/10 of its initial value ?

Ans.
$$t = \frac{2.303}{K} \log \frac{[R_0]}{[R]}$$

$$t = \frac{2.303}{\frac{1}{10}} \log \frac{[R_0]}{[R]}$$

$$t = \frac{2.303}{60} \log 10$$

$$t = \frac{2.303}{60}$$

$$= 3.38 \times 10^{-2} \text{ s}^{-1}$$

Q. 2. The rate of most of reaction double when their temperature is raised from 298 K to 308 K. Calculate the activation energy of such a reaction.

Ans.

$$\log \frac{K_2}{K_1} = \frac{E}{2.303R} \left(\frac{1}{T_1} - \frac{1}{T_2} \right)$$

$$E_a = \frac{2.303 \times 8.314 \times 298 \times 308 \times 0.3010}{1000}$$

$$E_a = 52.89 \text{ KJ/mol}$$

Q. 3. A first order reaction takes 69.3 min for 50% completion. Set up an equation for determining the time needed for 80% completion.

Ans.

$$K = \frac{0.693}{t_{1/2}}$$

$$= \frac{0.693}{69.3} \text{ min}^{-1}$$

$$= 10^{-2} \text{ min}^{-1}$$

$$T = \frac{2.303}{K} \log \frac{[R_0]}{[R]}$$

$$= \frac{2.303}{10^{-2}} \log 5$$

$$= 160.9 \text{ min}$$

Q. 4. The rate constant of a reaction is $1.2 \times 10^{-3} \text{ sec}^{-1}$ at 40° C . Calculate the energy of activation of the reaction.

Ans.

$$K_1 = 1.2 \times 10^{-3} \text{ sec}^{-1} \quad T_1 = 30 + 273 = 303 \text{ K}$$

$$K_2 = 2.1 \times 10^{-3} \text{ sec}^{-1} \quad T_2 = 40 + 273 = 313 \text{ K}$$

Using,

$$\log \frac{K_2}{K_1} = \frac{E_a}{2.303R} \left(\frac{T_2 - T_1}{T_1 T_2} \right)$$

⇒

$$E_a = 44.13 \text{ KJ mol}^{-1}$$

Q. 5. The activation energy of a reaction is 94.14 KJ/mol and the value of rate constant at 40° C is $1.8 \times 10^{-1} \text{ sec}^{-1}$. Calculate the frequency factor A.

Ans. Given, $E_a = 94.14 \times 10^3 \text{ J mol}^{-1}$, $T = 40 + 273 = 313 \text{ K}$, $K = 1.8 \times 10^{-1} \text{ sec}^{-1}$

By using, ⇒

Or

Or

Or $A = \text{antilog}(10.9635) = 9.194 \times 10^{10} \text{ sec}^{-1}$

Q. 6. The rate constant of a reaction at 500 K and 700 K are 0.02 s^{-1} and 0.07 s^{-1} respectively. Calculate the value of E_a and A.

Ans. 18.23 KJ mol⁻¹, 1.603

Q. 7. The rate constant of a reaction at 700 K and 760 K are $0.011 \text{ M}^{-1} \text{ s}^{-1}$ and $0.105 \text{ M}^{-1} \text{ s}^{-1}$ respectively. Calculate the value of Arrhenius parameters.

Ans. 2.824×10^{10}

Q. 8. The initial concentration of N_2O_5 in the first order reaction $\text{N}_2\text{O}_5 \rightarrow 2\text{NO}_2 + \frac{1}{2}\text{O}_2$ was $1.24 \times 10^{-2} \text{ mol L}^{-1}$ at 318 K. The concentration of N_2O_5 after 60 minutes was $0.20 \times 10^{-2} \text{ mol L}^{-1}$. Calculate the rate constant of the reaction at 318 K.

Ans.

$$= 0.0304 \text{ min}^{-1}$$

- Q. 9. The following data were obtained during the first order thermal decomposition of N_2O_5 at constant volume :



S. No.	Time per second	Total pressure (atm)
1	0	0.5
2	100	0.512

Calculate rate constant.

Ans. $4.98 \times 10^{-4} \text{ sec}^{-1}$

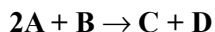
- Q. 10. A first order reaction is 20% complete in 20 minutes. Calculate the time taken for the reaction to go to 80% completion.

Ans. 144.3 minutes

- Q. 11. For a first order reaction, calculate the ratio between the time taken to complete $\frac{3}{4}$ of the reaction and the time taken to complete half of the reaction.

Ans. Two

- Q. 12. The following results have been obtained during the kinetics studies of the reaction :



Experiment	[A] mol L ⁻¹	[B] mol L ⁻¹	Initial rate of formation of D mol L ⁻¹ min ⁻¹
I	0.1	0.1	6.0×10^{-3}
II	0.3	0.2	7.2×10^{-2}
III	0.3	0.4	2.88×10^{-1}
IV	0.4	0.1	2.40×10^{-1}

Determine the rate law and the rate constant for the reaction.

Ans. Rate = $K[\text{A}][\text{B}]$

- Q. 13. The rate of reaction triples when the temperature changes from 293 K to 313 K. Calculate the energy of activation of the reaction assuming that it does not change with temperature.

- Q. 14. A first order reaction takes 40 mins for 30 decomposition. Calculate $t_{1/2}$.

Ans. 77.7 mins.

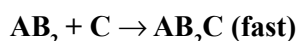
- Q. 15. The decomposition of A into product has value of K as $4.5 \times 10^3 \text{ sec}^{-1}$ at 10°C and energy of activation 60 kJ/mol. At what temperature would K be $1.5 \times 10^4 \text{ sec}^{-1}$.

Ans. 24°C

Q. 16. The rate of formation of NO is $3.6 \times 10^{-3} \text{ mol L}^{-1} \text{ sec}^{-1}$. Calculate the rate of disappearance of NH_3 and rate of formation of H_2O .

Ans. $3.6 \times 10^{-3} \text{ Ms}^{-1}$, $5.4 \times 10^{-3} \text{ Ms}^{-1}$

Q. 17. (a) Write rate law and order of the following reaction :



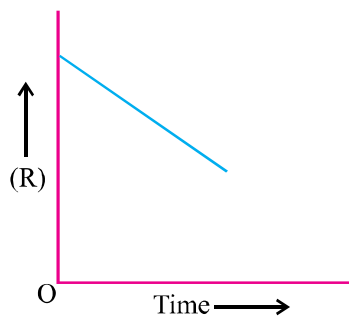
(b) Define energy of activation of a reaction.

(c) What is the relationship between rate constant and activation energy of a reaction ?

Ans. (a) Rate = $K[\text{AB}_2][\text{C}_2]$, Order = $1 + 1 = 2$

(c) $K = Ae^{-E_a/RT}$

Q. 18. For a chemical reaction $\text{R} \rightarrow \text{P}$, the variation in the concentration (R) vs time (t) plot is given :



- (a) Predict the order of reaction.
 (b) Write down its rate law.
 (c) What is the slope of the curve ?

Q. 19. What do you understand by a first order reaction ? Show that for a first order reaction time required to complete a definite fraction of the reaction is independent of initial concentration.

Q. 20. In a pseudo first order reaction of hydrolysis of an ester in H_2O , the following results were obtained :

t/s	0	30	60	90
Ester (M/L)	0.55	0.31	0.17	0.085

- (a) Calculate the average rate of reaction between the time interval 30 to 60 sec.
 (b) Calculate the pseudo first order rate constant for the hydrolysis of ester.

Ans. (a) Average rate during 30-60 sec. = $\frac{0.17 - 0.31}{60 - 30} = 4.67 \times 10^{-3} \text{ mol L}^{-1} \text{ sec}^{-1}$

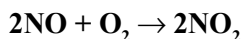
$$(b) \quad K_{30} = \frac{2.303}{t} \log \frac{[A]_0}{[A]} = \frac{2.303}{30} \log \frac{0.55}{0.31}$$

$$K_{60} = \frac{2.303}{60} \log \frac{0.55}{0.17}$$

$$K_{90} = \frac{2.303}{90} \log \frac{0.55}{0.085}$$

$$\text{Average } K = 1.98 \times 10^{-2} \text{ sec}^{-1}$$

Q. 21. Following reaction takes place in one step :



How will the rate of the reaction of the above reaction change if the volume of reaction vessel is diminished to 1/3 of its original volume ? Will there be any change in the order of reaction with reduced volume ?

Ans. $2\text{NO} + \text{O}_2 \rightarrow 2\text{NO}_2$

$$dx/dt = K^*[\text{NO}]_2[\text{O}_2]_1$$

[Since it is one step.]

If the volume of reaction vessel is diminished to 1/3, conc. of both NO and O₂ will become 3 times, the rate of reaction increased 27 times in the order of reaction with the reduced volume.

Q. 22. The decomposition of NH₃ on platinum surface is a zero order reaction. What are the rate of production of N₂ and H₂ ? [K = 2.5 × 10⁻⁴]

Ans. $2\text{NH}_3 \rightarrow \text{N}_2 + 3\text{H}_2$

$$-\frac{1}{2} \frac{d[\text{NH}_3]}{dt} = \frac{d[\text{N}_2]}{dt} + \frac{1}{3} \frac{d[\text{H}_2]}{dt}$$

$$\frac{d[\text{NH}_3]}{dt} = \text{rate} = k \times [\text{NH}_3]^0$$

$$= 2.5 \times 10^{-4} \text{ mol L}^{-1} \text{ sec}^{-1}$$

$$\frac{d[\text{N}_2]}{dt} = -\frac{1}{2} \frac{d[\text{NH}_3]}{dt}$$

$$= \frac{1}{2} \times 2.5 \times 10^{-4} \text{ mol L}^{-1} \text{ sec}^{-1}$$

$$d[\text{H}_2] = -\frac{3}{2} \frac{d[\text{NH}_3]}{dt} = \frac{3}{2} \times 2.5 \times 10^{-4}$$

$$= 3.75 \times 10^{-4} \text{ mol L}^{-1} \text{ sec}^{-1}$$

$$\text{Rate} = -\frac{d[\text{NH}_3]}{dt} = k \times [\text{NH}_3]^0$$

$$= 2.5 \times 10^{-4} \text{ mol L}^{-1} \text{ sec}^{-1}$$

$$\text{Rate of production of N}_2 = 2.5 \times 10^{-4} \text{ mol L}^{-1} \text{ sec}^{-1}$$

LONG ANSWER TYPE QUESTIONS

Q. 1. (a) Define order of reaction.

(b) Rates of reaction double with every 10° rise in temperature. If this generalization holds for a reaction in the temperature ranges 298 K to 308 K, what would be the value of activation energy for their reaction ? R = 8.314 J K⁻¹ mol⁻¹.

Ans. (a) Order of Reaction : It is the sum of powers to which the conc. terms are raised in rate law expression.

$$(b) \quad \log \frac{K_2}{K_1} = \frac{E_a}{2.303R} \left[\frac{1}{T_1} - \frac{1}{T_2} \right]$$

$$\text{Here, } T_1 = 298 \text{ K, } T_2 = 308 \text{ K, } R = 8.314 \text{ J K}^{-1} \text{ mol}^{-1}$$

$$\frac{K_2}{K_1} = 2$$

$$\log 2 = \frac{E_a}{2.303 \times 8.314} \left[\frac{1}{298} - \frac{1}{308} \right]$$

$$0.3010 = \frac{E_a}{2.303 \times 8.314} \left[\frac{10}{298 \times 308} \right]$$

$$E_a = \frac{0.3010 \times 2.303 \times 8.314 \times 298 \times 308}{10}$$

$$= 52898 \text{ J mol}^{-1}$$

$$= 52.898 \text{ KJ mol}^{-1}$$

Q. 2. (a) What are pseudo chemical reaction ? Give example.

(b) Rate constant K of a reaction varies with temperature 'T' according to the equation :

$$\log K = \log A - \frac{E_a}{2.303R} \left(\frac{1}{T} \right)$$

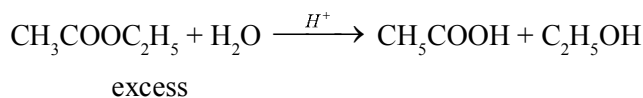
where E_a is the activation energy. When a graph is plotted for $\log K$ vs $1/T$, a straight line with a slope of -4250 K is obtained. Calculate E_a for the reaction.

Ans. (a) $\text{Slope} = \frac{E_a}{2.303R} = -4250 \text{ K}$

$$\begin{aligned} \text{So, } E_a &= -2.303 \times R \times \text{Slope} \\ &= -2.303 \times 8.314 \text{ J K}^{-1} \text{ mol}^{-1} \times 4250 \\ &= 81375.3 \text{ J mol}^{-1} \\ &= 81.375 \text{ KJ mol}^{-1} \end{aligned}$$

- (b) The chemical reaction which look like higher order reaction but in real they follow lower order kinetics.

For example,



$$\text{Rate} = K[\text{CH}_3\text{COOC}_2\text{H}_5]$$

$$\text{Order} = 1$$

- Q. 3. (a) Determine the units of rate constant for first and zero order reaction.**
(b) Show that time required for the completion of 99% of the first order reaction is twice the 90% of completion of the reaction.

Ans. (a) $K = (\text{mol})^{1-n} \text{ L}^{n-1} \text{ S}^{-1}$

For zero order, $n = 0$

$$\text{So, } K = (\text{mol})^{1-0} \text{ L}^{0-1} \text{ S}^{-1} = \text{S}^{-1} \text{ mol L}^{-1}$$

For first order, $n = 1$

$$K = (\text{mol})^{1-n} \text{ L}^{n-1} \text{ S}^{-1}$$

$$\begin{aligned} \text{So, } K &= (\text{mol})^{1-1} \text{ L}^{1-1} \text{ S}^{-1} \\ &= \text{S}^{-1} \end{aligned}$$

- (b) For a first order reaction,

$$t = \frac{2.303}{K} \log \frac{[A]_0}{[A]}$$

$$[A]_0 = a, \quad = 0.01 a$$

...(i)

For 90% completion of reaction,

...(ii)

Dividing equation (i) by equation (ii), we get

$$t(99\%) = 2 \times t(90\%)$$

Q. 4. (a) Define rate constant of reaction.

(b) A first order reaction takes 40 mins for 30% decomposition. Calculate $t_{1/2}$.

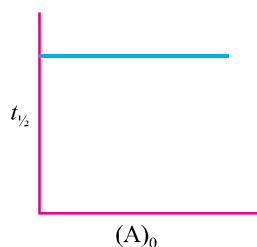
Ans. (a) Rate constant : It is the rate of chemical reaction when the concentration of reactant taken as unity at a given temperature.

(b) Let initial conc. = a

$$\begin{aligned} \text{Conc. after 40 mins.} &= \\ &= 0.70 a \end{aligned}$$

$$\begin{aligned}
 &= \frac{2.303}{40} \times 0.1549 \\
 &= 8.92 \times 10^{-3} \text{ min}^{-1} \\
 t_{1/2} &= \frac{0.693}{K} \\
 &= \frac{0.693}{8.92 \times 10^{-3}} = 77.7 \text{ min}
 \end{aligned}$$

Q. 5. (a) Determine the order of reaction and also determine the units of rate constant.



(b) The following data were given for thermal decomposition of SO_2Cl_2 at a constant volume :



Exp.	Time/s	Total p/atm
1	0	0.5
2	100	0.6

Calculate the rate of the reaction when total pressure is 0.65 atm.

Ans. (a) First order reaction

$$K = \text{mol}^{1-n} \text{ L}^{n-1} \text{ S}^{-1}$$

$$n = 1$$

$$K = (\text{mol})^{1-1} \text{ L}^{1-1} \text{ S}^{-1}$$

$$= \text{S}^{-1}$$

(b)

$$\begin{aligned}
 k &= \frac{2.303}{t} \log \frac{P_1}{(2P_1 - P_t)} \\
 &= \frac{2.303}{100} \log \frac{0.5}{(2 \times 0.5 - 0.6)} \\
 &= \frac{2.303}{100} \log \frac{0.5}{0.4}
 \end{aligned}$$

$$= \frac{2.303}{100} \times 0.969 = 2.23 \times 10^{-3} \text{ s}^{-1}$$

$$\text{Now, Rate} = P_{\text{SO}_2\text{Cl}_2}$$

Pressure of SO_2Cl_2 when total pressure = 0.65 atm

$$\begin{aligned} P_{\text{SO}_2\text{Cl}_2} &= 2P_1 - P_t \\ &= 2 \times 0.5 - 0.65 \\ &= 0.35 \text{ atm} \end{aligned}$$

$$\begin{aligned} \text{Rate} &= 2.23 \times 10^{-3} \times 0.55 \\ &= 7.8 \times 10^{-4} \text{ atm S}^{-1} \end{aligned}$$

Q. 6. (a) The activation energy of a reaction is 100 kJ/mol. In the presence of catalyst the activation energy is decreased by 75%. What is the effect on rate constant of the reaction at 20° C ?

(b) $A + 2B \rightarrow 3C + 2D$

The rate of disappearance of B is $1 \times 10^{-2} \text{ mol L}^{-1} \text{ sec}^{-1}$. What will be (i) rate of reaction (ii) rate of change in the concentration of A and C ?

Ans. (a) 2.35×10^{13} times

$$[\text{Hint : } \log \frac{K_2}{K_1} = \frac{E - E'}{2.303RT} \Rightarrow \log \frac{K_2}{K_1} = \frac{75 \times 10^3}{2.303 \times 8.314 \times 293}]$$

(b) (5×10^{-3} , 5×10^{-3} , 15×10^{-3}) $\text{M L}^{-1} \text{ sec}^{-1}$

Q. 7. (a) For the reaction $2A + B \rightarrow A_2B$

the rate = $k[A][B]^2$ with $k = 2.0 \times 10^{-6} \text{ mol}^{-2} \text{ L}^2 \text{ sec}^{-1}$. Calculate the initial rate of reaction when $[A] = 0.1 \text{ mol L}^{-1}$, $[B] = 0.2 \text{ mol L}^{-1}$. Calculate the rate of reaction after $[A]$ is reduced to 0.06 mol L^{-1} .

(b) (i) The activation energy for the reaction $2\text{HI} \rightarrow \text{H}_2 + \text{I}_2$ is 209.5 KJ/mol at 581 K. Calculate the fraction of molecules of reactants having energy equal to or greater than activation energy.

(ii) The activation energy of a reaction is zero. Will the rate constant of the reaction depend upon temperature ? Give reason.

Ans. $K = Ae^{-E_a/RT}$ if $E_a = 0$, then $K = A$. Frequency factor (A) does not depend upon temperature, therefore, rate constant and rate does not depend on temperature.

Q. 8. The concentration of R in the reaction $R \rightarrow P$ was measured as a function of time and the following data is obtained :

[R] molar	1.0	0.75	0.40	0.10
t (in min)	0.0	0.05	0.12	0.18

Calculate the order of the reaction.

[Hint : Determine the rate of reaction at different intervals of time. It comes out to be constant. Hence, it is a zero order reaction.]

VALUE BASED QUESTIONS (4 Marks)

Q. 1. Food and dairy products get spoiled more quickly in summer. Therefore, use of refrigerator has become very common in almost every house. Sita, a class XII Chemistry student, suggested her mother to store milk and other dairy products in refrigerator and not in open on kitchen slab.

- Why Sita suggested her mother to store milk and dairy products in the refrigerator ?
- Mention the relationship to express how rate of reaction is related with temperature.
- What values are learnt by Sita's advice ?
- Name the food preservative used to prevent spoilage of food.

Q. 2. Ramesh tried his best to carry out the reaction between the pure hydrogen with pure oxygen but he failed. Mohan, a friend of Ramesh, suggested that the reaction must be carried out in the presence of Pt catalyst. As he placed platinum in the reaction mixture, the reaction took place explosively.

- Mention the role of catalyst in the above chemical reaction.
 - What values are associated with the suggestion of Mohan ?
- Define (c) activity and (d) selectivity of a catalyst.

Q. 3. Sudha's mother received a phone call on Monday morning from a close relative stating that three of them would be coming over for lunch. Sudha's mother noticed that she did not have enough curd to serve the guests. Sudha, a class XII chemistry student, suggested to her mother to take warm milk and keep it under direct sunlight and curdle it.

- Why do you think Sudha suggested the above method ?
- Will it be helpful if her mother followed Sudha's suggestion ?
- What values are associated with Sudha's suggestion ?
- Name the bacteria responsible for curdling of milk.



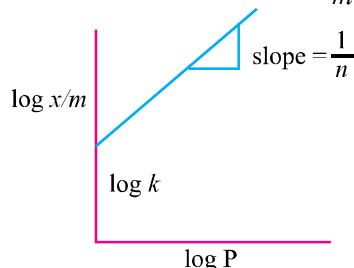
UNIT 5

SURFACE CHEMISTRY

Points to Remember

1. Adsorption occurs because of unbalanced forces acting inwards on the surface of the solid or a liquid.
2. The substance adsorbed is called **adsorbate** and substance on which adsorption takes place is **adsorbent**.
3. In physical adsorption, adsorbate is held to adsorbent by weak van der Waals forces. In chemisorptions, adsorbate is held to adsorbent by strong chemical bond type of forces.
4. Water vapours are adsorbed in silica gel but absorbed in CaCl_2 .
5. If the concentration of adsorbate is more on the surface with respect to bulk, it is called **positive adsorption**. If it is less on the surface with respect to bulk, it is called **negative adsorption**.
6. Greater the surface area of the adsorbent, the more is the extent of adsorption.
7. Higher the critical temperature of a gas, greater is its extent of adsorption.
8. Physical adsorption is due to van der Waals forces and is reversible. Chemisorption involves the formation of compounds on the surface and is irreversible.
9. At constant temperature, adsorption generally increases with pressure. The lower the temperature, the greater is the effect of pressure.
10. Freundlich adsorption isotherm is

$$\frac{x}{m} = kP^{1/n} \quad (n > 1) \quad \text{i.e.,} \quad \log \frac{x}{m} = \log k + \frac{1}{n} \log P$$



The plot of $\log x/m$ vs $\log P$ gives a straight line with slope = $1/n$ and y -intercept = $\log k$.

11. Adsorption is generally temperature dependent. Generally adsorption is **exothermic** and, therefore, adsorption decreases with the increase in temperature.
12. For adsorption from solution, pressure (P) is replaced by equilibrium concentration (C).
13. A catalyst is a substance that increases the rate of reaction without being consumed in the reaction. In general, a catalyst functions by lowering the energy of activation which in turn makes the rate constant larger and, hence, the rate of reaction higher. (The catalysts take part in reaction but get regenerated during course of reaction.)
14. In **homogeneous catalysis**, the catalyst is in the same phase as that of reactants and in **heterogeneous catalysis**, the catalyst is in the different phase from the reactants.
15. **Enzymes** are biological catalysts. Their main characteristics are their high *specificity*, efficiency (even in traces) and activity at physiological temperature of 37° C and pH of 7.4.
16. Enzyme catalysed reaction takes place in two steps :
$$E + S \rightarrow [ES] \text{ (fast and reversible)}$$
$$[ES] \rightarrow E + P \text{ (slow and rate determining)}$$

(E is enzyme, S is substrate and P is product.)
17. **Colloidal solutions** are intermediate between true solutions and suspensions. Their size ranges in the order 1 nm to 1000 nm.
18. A colloidal system consists of two phases : the dispersed phase and dispersion phase.
19. **Lyophilic sols** : There is strong attraction between dispersed phase and dispersion medium. These are formed by organic substances like gum, starch, protein etc. These are reversible and more stable.
20. **Lyophobic sols** : There is very little interaction between dispersed phase and dispersion medium and are formed by inorganic substances like metals, their sulphides etc. These are irreversible and less stable.
21. The stability of lyophilic sols is due to their greater hydration in the solution.
22. The colloidal systems show Brownian movement, Tyndall effect and electrophoresis.
23. Aggregate of ions in an associated colloidal sol is called **ionic micelle**. The concentration above which these are formed is called **critical micelle concentration** (CMC) and the temperature above which these are formed is called **Kraft temperature** (T_k).

24. Conversion of a freshly precipitated substance into colloidal sol by shaking with a suitable electrolyte is called **peptization**.
25. The movement of colloidal particles under the influence of an electric field is called **electrophoresis**.
26. The process of changing the colloidal particles in a sol into the insoluble precipitate by the addition of some suitable electrolytes is known as **coagulation**.
27. According to Hardy Schulze rule, greater the valency of the flocculating ion of the electrolyte, the faster is the coagulation.
28. The minimum number of millimoles of the electrolyte required for complete coagulation of one litre of a colloidal sol is called its **coagulation or flocculation value**.
29. The minimum number of milligrams of a lyophilic sol needed to protect 10 mL of gold sol by the addition of 1 mL of 10% NaCl is called **gold number**. Protective power is the reciprocal of gold number.
30. **Emulsions** are colloidal systems in which both dispersed phase and dispersion medium are liquids. These can be of (i) oil in water (o/w) and (ii) water in oil (w/o) type.
31. The process of making emulsion is called emulsification.
32. To stabilize an emulsion, an emulsifying agent or emulsifier is added. Soap and detergents are most frequently used as **emulsifiers**.
33. The potential difference between the fixed layer and the diffused layer of opposite charges in colloids is called electrokinetic potential or zeta potential.

VERY SHORT ANSWER TYPE QUESTIONS (1 Mark)

Q. 1. Why does a gas mixed with another gas not form a colloidal system ?

[Hint : Gaseous mixture is homogeneous.]

Q. 2. Why are adsorbate particles attracted and retained on the surface of adsorbent ?

[Hint : The unbalanced forces of the adsorbent are responsible for attracting adsorbate particles at adsorbent surface.]

Q. 3. Explain the terms sorption and desorption.

[Hint : Sorption is used to describe the process when adsorption and absorption take place simultaneously.

Desorption : Removal of adsorbate from the surface of adsorbent.]

Q. 4. "Chemisorption is highly specific." Illustrate with an example.

[Hint : As it involves chemical bonding between adsorbent and adsorbate.]

Q. 5. “Adsorbents in finely divided form are more effective.” Why ?

[Hint : Due to their more surface area in finely divided form.]

Q. 6. Name two compounds used as adsorbent for controlling humidity.

Ans. Silica gel, Alumina gel

Q. 7. Mention one shape selective catalyst used to convert alcohol directly into gasoline.

[Hint : ZSM-5]

Q. 8. ‘Generally high temperature is favourable for chemisorption.’ Why ?

[Hint : To provide energy of activation.]

Q. 9. Name the catalyst used in the following process :

(a) Haber’s process for the manufacture of NH_3 gas.

(b) Ostwald process for the manufacture of nitric acid.

[Hint : (a) Finely divided Fe/FeO, MO as promoter.

(b) Pt (Platinised asbestos)]

Q. 10. Write Freundlich adsorption isotherm relation.

$$\frac{x}{m} = kP^{1/n} \quad (n > 1) \quad \log \frac{x}{m} = \log k + \frac{1}{n} \log P$$

[Hint :]

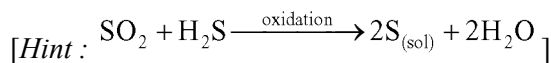
Q. 11. Which group elements show maximum catalytic activity for hydrogenation reactions ?

[Hint : 7-9 group elements.]

Q. 12. Why gas masks are used by miners in coal mines while working ?

[Hint : To absorb poisonous gases.]

Q. 13. Write the chemical reaction involved in the preparation of sulphur sol.



Q. 14. Name the enzyme which converts milk into curd.

[Hint : Lactobacilli.]

Q. 15. What are the optimum temperature and pH at which enzymes are highly active ?

[Hint : Temperature 298-310 K and pH 5 to 7]

Q. 16. What are the physical states of dispersed phase and dispersion medium in foam rubber ?

[Hint : Dispersed phase : Gas; Dispersion medium : Solid]

Q. 17. What is the composition of colloidal solution ?

[Hint : 4% solution of nitrocellulose in a mixture of alcohol and ether.]

Q. 18. Why do colloidal particles show Brownian movement ?

[Hint : Due to unbalanced bombardment of the dispersed phase particles by the molecules of the dispersion medium.]

Q. 19. State the sign of entropy change involved when the molecules of a substance get adsorbed on a solid surface.

[Hint : $\Delta S = -ve$]

Q. 20. Why does sky appear blue to us ?

[Hint : Due to scattering of blue light by dust particles and water suspended in air.]

Q. 21. What happens when hydrated ferric oxide and arsenious sulphide sols are mixed in almost equal proportions ?

[Hint : Mutual precipitation/coagulation took place.]

Q. 22. Gelatin is generally added to ice-cream. Why ?

[Hint : Ice-cream is water in oil type emulsion and gelatin acts as emulsifier.]

Q. 23. How is lake test for aluminium ion based upon adsorption ?

[Hint : $Al_2O_3 \cdot xH_2O$ has the capacity to adsorb the colour of blue litmus from the solution.]

Q. 24. What is saturation pressure in Freundlich's isotherm ?

[Hint : High pressure]

Q. 25. Mention the two conditions for the formation of micelles.

[Hint : CMC and T_k .]

Q. 26. How is Brownian movement responsible for the stability of sols ?

[Hint : Stirring effect due to Brownian movement does not allow the particles to settle down.]

Q. 27. Which of the following is more effective in coagulating positively charged hydrated ferric oxide sol : (i) KCl, (ii) $CaSO_4$, (iii) $K_3[Fe(CN)_6]$?

[Hint : $K_3[Fe(CN)_6]$]

Q. 28. State the purpose of impregnating the filter paper with colloidal solution.

[Hint : To reduce pore size of filter paper, so that colloidal particles cannot pass through.]

Q. 29. Mention one use of ZSM-5 catalyst.

[Hint : In dehydration of alcohols in formation of synthetic gasoline.]

Q. 30. Name the enzyme which convert starch into maltose.

Ans. Diastase/Salivary amylase.

Q. 31. Why is it necessary to remove CO (carbon monoxide) when ammonia is obtained by Haber's process ?

Ans. CO acts as poison catalyst for Haber's process therefore, it will lower the activity of the Fe catalyst.

Q. 32. Explain the terms : (i) CMC, (ii) Kraft temperature (T_k).

[Hint : CMC : Concentration above which micelle formation took place.

Kraft Temperature : It is the temperature above the micelle formation took place.]

SHORT ANSWER-I TYPE QUESTIONS (2 Marks)

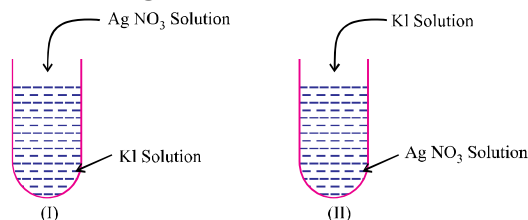
Q. 1. Explain the effect of temperature on the extent of physical and chemical adsorption.

[Hint : Physical adsorption decreases with increase of temperature, while chemical adsorption increases with increase of temperature.]

Q. 2. Define the term peptization and mention its cause.

[Hint : It is the process of converting a ppt into a colloidal sol by shaking it with small amount of electrolyte with dispersion medium. Ppts adsorb one of the ions of the electrolyte on its surface.]

Q. 3. What will be the charge on colloidal solutions in the following cases ?



Give reasons for the origin of charge.

Ans. (i) Ag^+ ions are adsorbed on AgI , forming positively charged colloid.

(ii) I^- ions are adsorbed on AgI forming negatively charged colloid.

Reason for origin of charge is the preferential adsorption of common ions of the electrolyte present in excess.

Q. 4. Write the factors upon which the catalytic reaction of shape-selective catalyst depends ?

[Hint : (a) Pore structure of the catalyst.

(b) Size and shape of the reactant and product molecules.]

Q. 5. Mention two examples of emulsifying agents for o/w emulsions and w/o emulsions.

[Hint : For o/w emulsions : Proteins, gums, soaps.

For w/o emulsions : Fatty acids, long chain alcohols, lampblack.]

Q. 6. Suggest a mechanism of enzyme catalysed reaction.

[Hint : (a) Binding of enzyme and substrate : $E + S \rightarrow [ES]$

(b) Decomposition of activated complex to product : $[ES] \rightarrow E + P$

Q. 7. A small amount of silica gel and a small amount of anhydrous calcium chloride are placed separately in two beakers containing water vapour. Name the phenomenon that takes place in both the beakers.

[Hint : Silica gel : Adsorption, Anhydrous $CaCl_2$: Absorption, as it forms $CaCl_2 \cdot 2H_2O$]

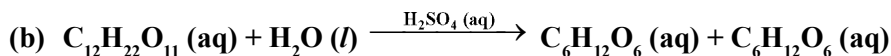
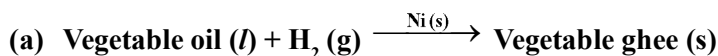
Q. 8. Write the differences between adsorption and absorption.

[Hint : Adsorption is surface, while absorption is bulk phenomenon.]

Q. 9. How can physisorption be distinguished from chemisorptions ?

[Hint : Physisorption arises because of van der Waal's forces, not specific and reversible while chemisorptions is caused by chemical bond formation, highly specific and irreversible.]

Q. 10. Classify the following reactions as homogeneous and heterogeneous catalysis :



[Hint : (a) : Heterogeneous catalysis

(b) : Homogeneous catalysis

Q. 11. In what ways these are different : (a) a sol and a gel (b) a gel and an emulsion ?

[Hint :

(a) For a sol : Dispersed phase : Solid, Dispersion medium : Liquid

For a gel : Dispersed phase : Liquid, Dispersion medium : Solid

(b) For a gel : Dispersed phase : Liquid, Dispersion medium : Solid

For an emulsion : Dispersed phase : Liquid, Dispersion medium : Liquid]

Q. 12. State 'Hardy Schulze Rule' with one example.

[Hint : It states that greater the valency of the flocculating ion of the electrolyte, the faster is the coagulation.]

Q. 13. What is an emulsifying agent ? What role does it play in forming an emulsion ?

[Hint : Those agents which stabilize emulsions. It acts as binding agent between two immiscible liquid phases.]

Q. 14. Define the terms :

(a) **Helmholtz electrical double layer**

(b) **Zeta potential**

[Hint : (a) The combination of the two layers of opposite charges around the colloidal particles. E.g., AgI/I⁻-K⁺.

(b) The potential difference between the fixed layer and diffused layer of opposite charges is called zeta potential.]

Q. 15. A graph between x/m and $\log p$ is a straight line at an angle of 45° with intercept on the y-axis i.e., $(\log k)$ equal to 0.3010. Calculate the amount of the gas absorbed per gram of the adsorbent under a pressure of 0.5 atmosphere.

$$\left[\begin{array}{l} \text{Hint : Refer to NCERT Textbook page 125, Fig. 5.2} \\ \frac{1}{n} = \tan 45^\circ = 1, \log k = 0.3010, k = 2, p = 0.5 \text{ atm} \\ \frac{x}{m} = kp^{1/n} = 2 \times (0.5)^1 = 1.0 \end{array} \right]$$

Q. 16. Mention the two necessary conditions for the observation of Tyndall effect.

[Hint : (a) The size of dispersed phase particles is not much smaller the wavelength of light used.

(b) The refractive indices of the dispersed phase and the dispersion medium differ greatly in magnitude.]

Q. 17. Account for the following :

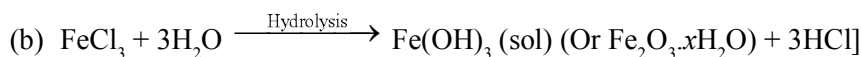
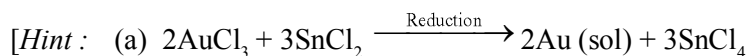
(a) **Artificial rain can be caused by spraying electrified sand on the clouds.**

(b) **Electrical precipitation of smoke.**

Q. 18. Write chemical equations for the preparation of sols :

(a) **Gold sol by reduction**

(b) **Hydrated ferric oxide sol by hydrolysis.**



Q. 19. How can the two emulsions can be distinguished :

(a) oil in water type (o/w) and

(b) water in oil type (w/o)

[Hint : (a) By dilution test

(b) By dye test]

Q. 20. Leather gets hardened after tanning. Why ?

Ans. Animal hide is colloidal in nature and has positively charged particles. When it is soaked in tanning which has negatively charged colloidal particles, it results in mutual coagulation. This results in the hardening of leather.

Q. 21. Why are some medicines more effective in the colloidal form ?

Ans. Medicines are more effective in the colloidal form because of large surface area and are easily assimilated in this form.

Q. 22. What happens when dialysis is prolonged ?

Ans. When dialysis is prolonged the traces of electrolyte which stabilises the colloids are removed completely. This makes the colloid unstable and therefore coagulation takes place.

SHORT ANSWER-II TYPE QUESTIONS (3 Marks)

Q. 1. Write the difference between :

(a) catalysts and enzymes

(b) promoters and poisons

[Hint : (a) Catalyst is a substance that alters the rate of reaction without consuming itself in the reaction. Enzymes are biocatalysts, they are highly specific than catalysts.

(b) Promoters enhance the activity of a catalyst while poisons decrease the activity of catalysts.]

Q. 2. Write the steps of 'Modern Adsorption Theory of Heterogenous Catalysis'.

[Hint : (a) Diffusion and adsorption of reactant molecules on the surface of catalyst.

(b) Formation of intermediate on the surface of catalyst.

(c) Desorption of the products from catalysts surface.

(d) Diffusion of products away from the catalyst surface.]

Q. 3. Mention two important features of solid catalysts and explain them with the help of suitable examples.

[Hint : Heterogeneous catalyst, activity and selectivity of catalysts. Example, Hydrogenation of unsaturated hydrocarbons in presence of Raney Ni or any other example.]

Q. 4. How are the following colloids different from each other in respect of dispersion medium and dispersed medium ? Give one example of each type.

(a) An aerosol (b) A hydrosol (c) An emulsion

[Hint : **D.P.** **D.M.** **Example**

(a) Solid/liquid	Gas	Smoke, dust, fog, cloud
(b) Solid	Water	Muddy water
(c) Liquid	Liquid	Milk, hair cream]

Q. 5. What happens :

- (a) By persistent dialysis of a sol.
- (b) When river water meets the sea water.
- (c) When alum is applied on cuts during bleeding.

[Hint : (a) Coagulation of sol takes place.

(b) Delta formation takes place due to coagulation of river water.

(c) Clot is formed due to coagulation of blood which stops further bleeding.]

Q. 6. Distinguish between multimolecular, macromolecular and associated colloids with the help of one example of each.

[Hint : (i) Multimolecular colloids formed by aggregation of small atoms or molecules. Example, gold sol, sulphur sol.

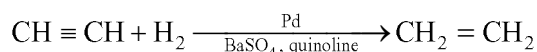
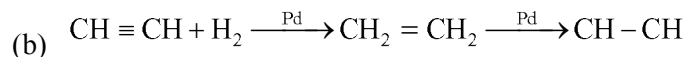
(ii) Macromolecular colloids formed by dispersing macromolecules having colloidal size in proper dispersion medium. Example, protein, starch colloid.

(iii) Associated colloids are formed by aggregation of particles at higher concentration to colloidal range. Example, micelles.]

Q. 7. (a) Which property of colloids is responsible for the sun to look red at the time of setting ?

(b) C_2H_2 on addition with H_2 forms ethane in presence of palladium catalyst but if reaction is carried in the presence of barium sulphate and quinoline, the product is ethane and not ethane. Why ?

Ans. (a) Sun is at horizon and blue part of the light is scattered away by the dust particles as light has to travel a long distance through the atmosphere.



(BaSO₄ in presence of quinoline act as poison. The catalyst in this case is not effective in further reduction.)

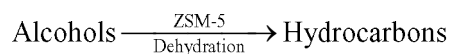
LONG ANSWER TYPE QUESTIONS (5 Marks)

Q. 1. Describe some features of catalysis by Zeolites.

Ans. Features of catalysis by Zeolites :

- (i) Zeolites are hydrated alumino silicates which have a three dimensional network structure containing water molecules in their pores.
- (ii) To use them as catalysts, they are heated so that water of hydration present in the pores is lost and the pores become vacant.
- (iii) The size of the pores varies from 260 to 740 pm. Thus, only those molecules can be adsorbed in these pores and catalyzed whose size is small enough to enter these pores. Hence, they act as molecular sieves or shape selective catalysts.

An important catalyst used in petroleum industries is ZSM-5. It converts alcohols into petrol by first dehydrating them to form a mixture of hydrocarbons.



Q. 2. Comment on the statement that “colloid is not a substance but state of a substance.”

Ans. The given statement is true. This is because the statement may exist as a colloid under certain conditions and as a crystalloid under certain other conditions. E.g., NaCl in water behaves as a crystalloid while in benzene, behaves as a colloid (called associated colloid). It is the size of the particles which matters *i.e.*, the state in which the substance exist. If the size of the particles lies in the range 1 nm to 1000 nm it is in the colloid state.

Q. 4. Write short notes on the following :

- (a) Tyndall Effect
- (b) Brownian Movement
- (c) Hardy Schulze Rule

Ans. (a) **Tyndall Effect :** Scattering of light by colloidal particles by which part of beam becomes clearly visible. This effect is known as tyndall effect.

- (b) **Brownian Movement** : Zig-zag motion of colloidal particles.
- (c) **Hardy Schulze Rule** : Coagulating value of a coagulating ion is directly proportional to the charge on the ion.

E.g., $\text{Na}^+ < \text{Ca}^{++} < \text{Al}^{3+}$ For negatively charged sol

$\text{Cl}^- < \text{CO}_3^{2-} < \text{PO}_4^{3-} < [\text{Fe}(\text{CN})_6]^{4-}$ For positive sol

MATCHING TYPE

Match the items of Column I and Column II in the following questions :

- Q. 1.** Method of formation of solution is given in Column I. Match it with the type of solution given in Column II.

Column I	Column II
(i) Sulphur vapours passed through cold water	(a) Normal electrolyte solution
(ii) Soap mixed with water above critical micelle concentration	(b) Molecular colloids
(iii) White of egg whipped with water	(c) Associated colloid
(iv) Soap mixed with water below critical micelle concentration	(d) Macro molecular colloids

- Q. 2.** Match the statement given in Column I with the phenomenon given in Column II.

Column I	Column II
(i) Dispersion medium moves in an electric field	(a) Osmosis
(ii) Solvent molecules pass through semi permeable membrane towards solvent side	(b) Electrophoresis
(iii) Movement of charged colloidal particles under the influence of applied electric potential towards oppositely charged electrodes	(c) Electro osmosis
(iv) Solvent molecules pass through semi permeable membranes towards solution side	(d) Reverse osmosis

Q. 3. Match the items given in Column I and Column II.

Column I	Column II
(i) Protective colloid	(a) $\text{FeCl}_3 + \text{NaOH}$
(ii) Liquid-liquid colloid	(b) Lyophilic colloids
(iii) Positively charged colloid	(c) Emulsion
(iv) Negatively charged colloid	(d) $\text{FeCl}_3 + \text{hot water}$

Q. 4. Match the types of colloidal systems given in Column I with the name given in Column II.

Column I	Column II
(i) Solid in liquid	(a) Foam
(ii) Liquid in solid	(b) Sol
(iii) Liquid in liquid	(c) Gel
(iv) Gas in liquid	(d) Emulsion

Q. 5. Match the items of Column I and Column II.

Column I	Column II
(i) Dialysis	(a) Cleansing action of soap
(ii) Peptisation	(b) Coagulation
(iii) Emulsification	(c) Colloidal sol formation
(iv) Electrophoresis	(d) Purification

Q. 6. Match the items of Column I and Column II.

Column I	Column II
(i) Butter	(a) Dispersion of liquid in liquid
(ii) Pumice stone	(b) Dispersion of solid in liquid
(iii) Milk	(c) Dispersion of gas in solid
(iv) Paints	(d) Dispersion of liquid in solid

Answers

- | | | | |
|--------------|------------|-------------|------------|
| 1. (i) – (b) | (ii) – (c) | (iii) – (d) | (iv) – (a) |
| 2. (i) – (c) | (ii) – (d) | (iii) – (b) | (iv) – (a) |
| 3. (i) – (b) | (ii) – (c) | (iii) – (d) | (iv) – (a) |
| 4. (i) – (b) | (ii) – (c) | (iii) – (d) | (iv) – (a) |
| 5. (i) – (d) | (ii) – (c) | (iii) – (a) | (iv) – (b) |
| 6. (i) – (d) | (ii) – (c) | (iii) – (a) | (iv) – (b) |

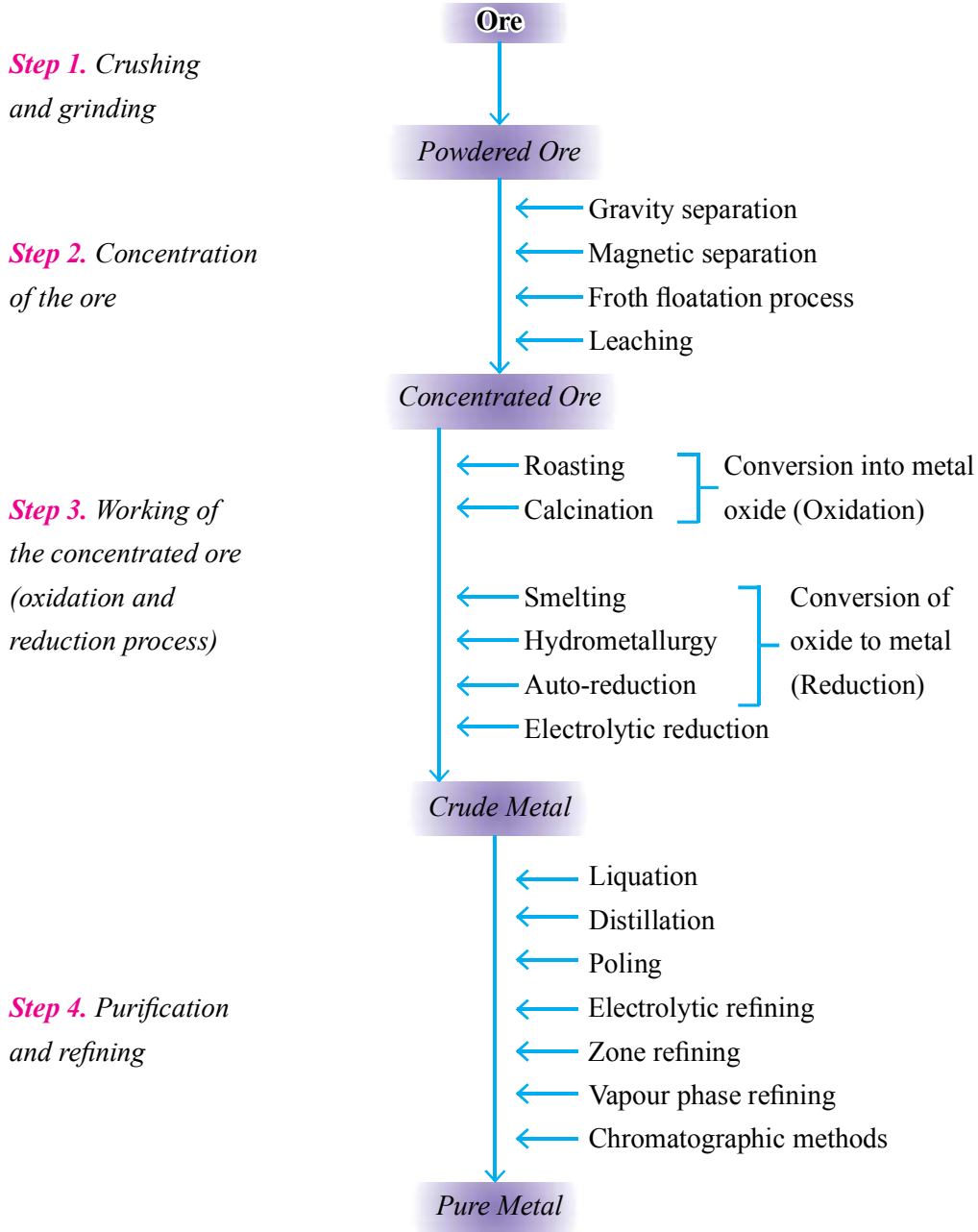
VALUE BASED QUESTIONS (4 Marks)

- Q. 1.** A factory was situated very close to the residential area where Sita lived. The smoke coming out from the chimney was causing a lot of health problems to people living in the area. Sita and few others decided to meet the top officials of factory and gave idea of installing Cottrell's smoke precipitator.
- Name the principle used in Cottrel precipitator.
 - How does precipitator cause precipitation and settling of smoke particles ?
 - What values do you attribute to Sita's concern ?
 - What happens when a strong beam of light is passed through the smoke ?
- Q. 2.** Ramesh, living in Ooty, was washing clothes in cold water during winter. He found that the clothes were not getting clean properly. Geetu, his niece, suggested that he should wash clothes in warm water because washing of clothes with soaps/detergents is easier in warm water than cold water.
- Why is it so ?
 - Why do we get lathers easily in warm water ?
 - Define CMC.
 - What values do you derive from this ?
- Q. 3.** Nandita observed that the barber applied alum on the face of his customer. He also observed her mother dissolving alum to purify muddy water.
- Which concept of colloidal solutions is observed by Nandita ?
 - How are deltas formed ?
 - State Hardy Schulze Rule.
 - Write the value associated with the observation.

UNIT-6

GENERAL PRINCIPLES AND PROCESSES OF ISOLATION OF ELEMENTS

Flow-sheet diagram of metallurgical process is given below :



General Types of Ores of Metals

Type of Ore	Metal	Name of ore
1. Oxides	Iron Aluminium Copper Zinc Manganese	Haematite, Fe_2O_3 Bauxite, $\text{Al}_2\text{O}_3 \cdot 2\text{H}_2\text{O}$ Cuprite, Cu_2O Zincite, ZnO Pyrolusite, MnO_2
2. Sulphides	Copper Lead Zinc Mercury	Copper pyrites, CuFeS_2 Galena, PbS Zinc blende, ZnS Cinnabar, HgS
3. Carbonates	Iron Copper Calcium Magnesium	Siderite, FeCO_3 Malachite, $\text{CuCO}_3 \cdot \text{Cu}(\text{OH})_2$ Limestone, CaCO_3 Dolomite, $\text{MgCO}_3 \cdot \text{CaCO}_3$
4. Chloride	Sodium Magnesium Silver	Rock salt, NaCl Carnallite, $\text{KCl} \cdot \text{MgCl}_2 \cdot 6\text{H}_2\text{O}$ Horn silver, AgCl
5. Sulphates	Calcium Lead	Gypsum, $\text{CaSO}_4 \cdot 2\text{H}_2\text{O}$ Anglesite, PbSO_4
6. Silicates	Magnesium	Calcium magnesium silicate, $\text{CaSiO}_3 \cdot 3\text{MgSiO}_3$ (Asbestos)

Various Types of Steel

Type of Steel	Carbon content	Properties	Uses
Mild Steel (Medium carbon)	0.2-0.5%	(i) It can be hardened by heat treatment. (ii) It has a good machining property. (iii) It is very good for welding.	(i) Lightly stressed machine fittings, turbine, motors, steel) railway axels, crank shafts, fish plates, cross heads, etc.
Hard Steel	0.5-0.7%	(i) It can be imparted desired hardness by heat treatment. (ii) It can be welded with a great care. Extremely hard	Wheels for railways service, cushion springs, clutch springs, dies, set screws, etc.
Chrome Steel	1.5-2% Cr	Extremely hard	For making armour – piercing projectiles, crushing machinery and cutlery.
Stainless Steel	11.5% Cr 2% Ni	Resists corrosion	For making cutlery, utensils, surgical instruments, auto-mobile parts and cycle parts.

Note : NaCN is used as depressant when an ore contains both ZnS and PbS. It selectively prevents ZnS from coming to the froth but allows PbS to come with the froth in froth floatation process.

VERY SHORT ANSWER TYPE QUESTIONS (1 Mark)

Q. 1. Name three metals which occur in native state in nature.

Ans. Au, Ag and Pt.

Q. 2. What are collectors in froth floatation process ? Give one example.

Ans. Pine oil.

Q. 3. Give the names and formulae of three ores which are concentrated by froth floatation process.

Ans. Galena (PbS), Zinc blende (ZnS), Cinnabar (HgS).

Q. 4. Among Fe, Cu, Al and Pb, which metal(s) cannot be obtained by smelting ?

Ans. Al.

Q. 5. What is the thermodynamic criteria for the feasibility of a reaction ?

Ans. ΔG should be $-ve$ or $\log K = +ve$.

Q. 6. Why can't aluminium be reduced by carbon ?

[Hint : Al is stronger reducing agent than carbon.]

Q. 7. Name the most important form of iron. Mention its one use.

Ans. Cast iron is used for making gutter pipes, castings, railway sleepers, toys etc.

Q. 8. Name the impurities present in bauxite ore.

Ans. SiO_2 , Fe_2O_3 and TiO_2 .

Q. 9. What is the composition of copper matte ?

[Hint : Cu_2S and FeS]

Q. 10. Which form of copper is called blister copper ?

[Hint : The solidified copper obtained has blistered appearance due to the evolution of SO_2 , so it is called blistered copper.]

Q. 11. What are froth stabilizers ? Give two examples.

[Hint : Examples are cresol and aniline.]

Q. 12. A sample of galena is contaminated with zinc blende. Name one chemical which can be used to concentrate galena selectively by froth floatation method.

Ans. $NaCN$

Q. 13. What are the constituents of German silver ?

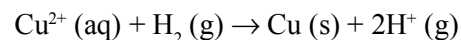
Ans. $Cu = 25-30\%$, $Zn = 25-30\%$, $Ni = 40-50\%$

Q. 14. Why is froth floatation process selected for concentration of the sulphide ore ?

Ans. Sulphide ore particles are wetted by oil (Pine oil) and gangue particles by water.

Q. 15. Write the reaction involved in the extraction of copper from low grade ores.

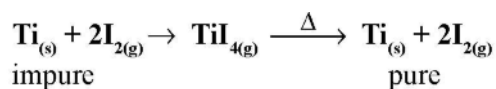
Ans. First step is leaching of ore with acid or bacteria then,



Q. 16. Although aluminium is above hydrogen in the electrochemical series, it is stable in air and water. Why ?

[Hint : Due to formation of inert oxide Al_2O_3 .]

Q. 17. Which method of purification is represented by the following reaction :



[Hint : Van Arkel method]

Q. 18. Zinc is used but not copper for the recovery for metallic silver from the complex $[\text{Ag}(\text{CN})_2]^-$, although electrode potentials of both zinc and copper are less than that of Ag. Explain why ?

[Hint : Zinc reacts at faster rate as compared with copper, further zinc is cheaper than copper.]

Q. 19. Write the composition of molten mixture which is electrolysed to extract aluminium.

[Hint : Molten $\text{Al}_2\text{O}_3 + \text{Na}_3\text{AlF}_6$ or CaF_2]

SHORT ANSWER-I TYPE QUESTIONS (2 Marks)

Q. 1. What is hydrometallurgy ? Give one example where it is used for metal extraction.

Ans. Leaching followed by reduction is called hydrometallurgy. It is used in extraction of copper.

Q. 2. Name the process for the benefaction/concentration of (i) an ore having lighter impurities, (ii) sulphide ore.

[Hint : (i) Gravity separation
(ii) Froth floatation]

Q. 3. Mention the role of cryolite in the extraction of aluminium.

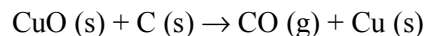
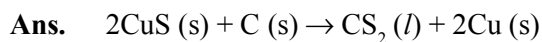
[Hint : It lowers the melting point of the mixture and brings conductivity.]

Q. 4. Mention the role of following :

- (a) SiO_2 in the metallurgy of Cu.
- (b) CaCO_3 in the metallurgy of Fe.
- (c) CO in the metallurgy of iron.
- (d) I_2 in the purification of zirconium.

[Hint : (a) Flux
(b) CaCO_3 decomposed to CaO, which acts as flux.
(c) Reducing agent
(d) To form a volatile complex with Zr.]

Q. 5. Extraction of copper directly from sulphide ore is less favourable than from its oxide through reduction. Explain.



G value is more -ve in second case as compared with first case.

Q. 6. The graphite electrodes in the extraction of 'aluminium' by Hall-Heroult process need to be changed frequently. Why ?

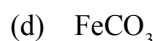
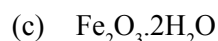
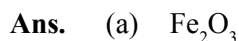
Q. 7. Write the chemical formulae of the following ores :

(a) Haematite

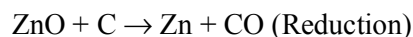
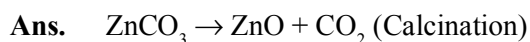
(b) Magnetite

(c) Limonite

(d) Siderite



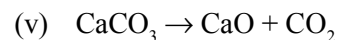
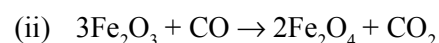
Q. 8. Give equations for the industrial extraction of zinc from calamine.



Q. 9. Name the elements present in anode mud during refining of copper. Why does it contain such elements ?

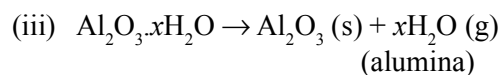
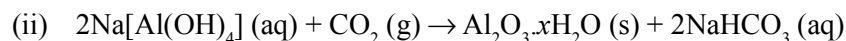
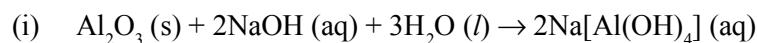
Ans. Au and Ag. They are not oxidized at anode. They are less electropositive than copper.

Q. 10. Write the chemical reactions taking place in different zones in the blast furnace for the extraction of iron from its ore.



Q. 11. How are impurities separated from bauxite ore to get pure alumina ?

[Hint : By leaching.

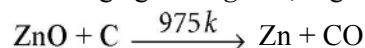


Q. 12. Why is the reduction of a metal oxide easier if metal formed is in liquid state at the temperature of reduction ?

[Hint : Entropy is more positive when the metal is in liquid state as compared with solid state, so ΔG becomes more -ve.]

Q. 13. What is pyrometallurgy ? Explain with one example.

Ans. A process of reducing a metal oxide by heating with either coke or some other reducing agent. *E.g.*, Al, Mg etc.



Q. 14. Write the method to produce copper matte from copper pyrites.

[Hint : Froth floatation.]

Q. 15. Copper can be extracted by hydrometallurgy but not zinc. Explain why ?

[Hint : $E^\circ_{\text{zn}^{2+}/2\text{n}} = -\text{ve}$, $E^\circ_{\text{cu}^{+2}/\text{cu}} = +\text{ve}$

Q. 16. Gibbs energy of formation ΔG_f° of MgO (s) and CO (g) at 1273 K and 2273 K are given below :

$$\Delta G_f [\text{MgO (s)}] = - 941 \text{ kJ mol}^{-1} \text{ at } 1273 \text{ K}$$

$$\Delta G_f [\text{CO (g)}] = - 439 \text{ kJ mol}^{-1} \text{ at } 1273 \text{ K}$$

$$\Delta G_f [\text{MgO (s)}] = - 314 \text{ kJ mol}^{-1} \text{ at } 2273 \text{ K}$$

$$\Delta G_f [\text{CO (g)}] = - 628 \text{ kJ mol}^{-1} \text{ at } 2273 \text{ K}$$

On the basis of above data, predict the temperature at which carbon can be used as a reducing agent for MgO (s).

Ans. For the reaction, $\text{MgO (s)} + \text{C (s)} \rightarrow \text{Mg (s)} + \text{CO (g)}$

$$\text{At } 1273 \text{ K, } \Delta G_r = \Delta G_f[\text{CO (g)}] - \Delta G_f[\text{MgO (s)}] = - 439 - (- 941) \text{ kJ mol}^{-1} = 502 \text{ kJ mol}^{-1}$$

$$\text{At } 2273 \text{ K, } \Delta G_r = - 628 - (- 314) \text{ kJ mol}^{-1} = - 314 \text{ kJ mol}^{-1}$$

The temperature is 2273 K.

SHORT ANSWER-II TYPE QUESTIONS (3 Marks)

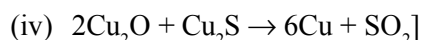
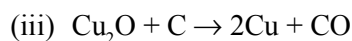
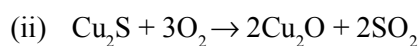
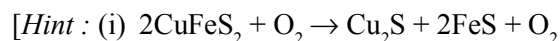
Q. 1. State the principle of refining of metal by the following methods :

- Zone refining
- Electrolytic refining
- Vapour phase refining

[Hint : (a) The impurities are more soluble in the melt than in the solid state of the metal.

(b) Impure metal is made to act as anode, while the strip of same metal in pure form as cathode.]

Q. 2. How is pure copper obtained from its principle ore ? Write the chemical reactions occurring during the extraction.

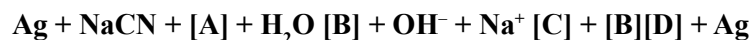


Q. 3. Name the method of refining of the following metals :

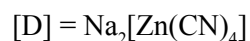
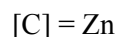
(a) Hg (b) Sn (c) Cu (d) Ge (e) Ni (f) Zr

Ans. (a) Distillation, (b) Liquefaction, (c) Electrolytic refining, (d) Zone refining, (e) Mond process, (f) Van Arkel process]

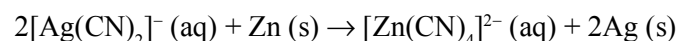
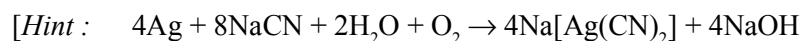
Q. 4. The native silver forms a water soluble compound (B) with dilute aqueous solution of NaCN in the presence of a gas (A). The silver metal is obtained by the addition of a metal (C) to (B) and complex (D) is formed as a byproduct. Write the structures of (C) and (D) and identify (A) and (B) in the following sequence :



Ans. [A] = O_2



Q. 5. In the cyanide extraction process of silver from argentite ore, name the oxidizing and reducing agents. Write the chemical equations of the reactions involved.



MATCHING TYPE QUESTIONS

Match the items given in Column I and Column II in the following questions.

Q. 1. Match the items of Column I with items of Column II and assign the correct code :

Column I

Column II

- | | |
|---------------|--|
| (A) Pendulum | (1) Chrome steel |
| (B) Malachite | (2) Nickel steel |
| (C) Calamine | (3) Na_3AlF_6 |
| (D) Cryolite | (4) $\text{CuCO}_3 \cdot \text{Cu}(\text{OH})_2$ |
| | (5) ZnCO_3 |

Q. 2. Match the items of Column I with items of Column II and assign the correct code :

Column I

Column II

- | | |
|--------------------------------------|-----------------------------|
| (A) Coloured bands | (1) Zone refining |
| (B) Impure metal to volatile complex | (2) Fractional distillation |
| (C) Purification of Ge and Si | (3) Mond process |
| (D) Purification of mercury | (4) Chromatography |
| | (5) Liquation |

Q. 3. Match the items of Column I with items of Column II and assign the correct code :

Column I

Column II

- | | |
|------------------------------|------------------------|
| (A) Cyanide process | (1) Ultrapure Ge |
| (B) Froth floatation process | (2) Dressing of ZnS |
| (C) Electrolytic reduction | (3) Extraction of Al |
| (D) Zone refining | (4) Extraction of Au |
| | (5) Purification of Ni |

Q. 4. Match the items of Column I with items of Column II and assign the correct code :

Column I

Column II

- | | |
|----------------|-----------------------------|
| (A) Sapphire | (1) Al_2O_3 |
| (B) Sphalerite | (2) NaCN |
| (C) Depressant | (3) Co |
| (D) Corundum | (4) ZnS |
| | (5) Fe_2O_3 |

Q. 5. Match the items of Column I with items of Column II and assign the correct code :

Column I

- (A) Blistered Cu
 (B) Blast furnace
 (C) Reverberatory furnace
 (D) Hall-Heroult process

Column II

- (1) Aluminium
 (2) $2\text{Cu}_2\text{O} + \text{Cu}_2\text{S} \rightarrow 6\text{Cu} + \text{SO}_2$
 (3) Iron
 (4) $\text{FeO} + \text{SiO}_2 \rightarrow \text{FeSiO}_3$
 (5) $2\text{Cu}_2\text{S} + 3\text{O}_2 \rightarrow 2\text{Cu}_2\text{O} + 2\text{SO}_2$

Answers

- | | | | | |
|----|-----------|-----------|-----------|-----------|
| 1. | (A) – (2) | (B) – (4) | (C) – (5) | (D) – (3) |
| 2. | (A) – (4) | (B) – (3) | (C) – (1) | (D) – (2) |
| 3. | (A) – (4) | (B) – (2) | (C) – (3) | (D) – (1) |
| 4. | (A) – (3) | (B) – (4) | (C) – (2) | (D) – (1) |
| 5. | (A) – (2) | (B) – (3) | (C) – (4) | (D) – (1) |

VALUE BASED QUESTIONS (4 Marks)

- Q. 1.** Ram and Shyam were extracting aluminium from purified Al_2O_3 . Ram used electrolytic cell for the reduction of Al_2O_3 but Shyam added cryolite in Al_2O_3 in the electrolytic cell to obtain aluminium.
- Who will obtain aluminium easily ?
 - Mention two functions of cryolite in this reduction process.
 - What is the role of graphite anode in the metallurgy of Al ?
 - What values are learnt by the use of cryolite (Na_3AlF_6) in the extraction of aluminium ?
- Q. 2.** Steel finds different uses and alloy steel is obtained when other metal like Cr, Ni are added to form nickel steel, chrome steel and stainless steel.
- What is alloy steel ?
 - Why do transition metals form alloys ?
 - A person wants to manufacture cycles and motor cycles in his factory. Name the alloy steel he should use for manufacturing the same.
 - Name the value learnt by the selection of a proper type of steel.
- Q. 3.** A person met to a housewife and motivated her for cleansing of gold ornaments at very low cost. Housewife gave gold ornaments to him. He placed them into a solution containing 1 part conc. HNO_3 and 3 parts conc. HCl . After sometime he showed the shiny gold ornaments to her. In the mean time, housewife's daughter

Pinki, a student of chemistry of Class XII, returns from school. She took the cleansing solution in her custody and the cleaner ran away. She explained all the chemistry behind the incident to her mother.

- (a) Name the solution used by cleaner for cleansing of gold ornaments.
- (b) How can we recover the gold from the solution used for cleansing purpose ?
- (c) Write the reaction that takes place between the solution and gold ornaments.
- (d) What values are learnt from the incident ?



UNIT 7

p-BLOCK ELEMENTS

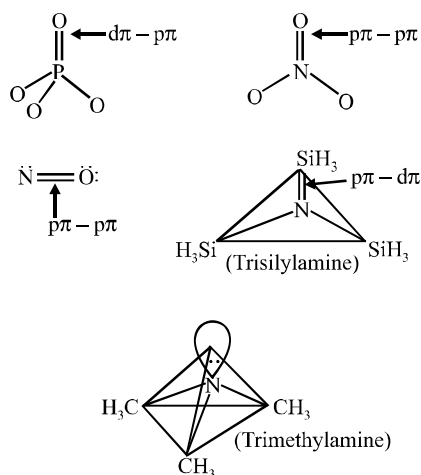
Anomalous behavior of first element in the p-block elements is attributed to small size, large (charge/radius) ratio, high ionization enthalpy, high electronegativity and unavailability of d-orbitals in its valence shell.

Consequences :

1. The first element in p-block element has four valence orbitals *i.e.*, one 2s and three 2p. Hence maximum covalency of the first element is limited to four. The other elements of the p-block have vacant d-orbitals in their valence shell, *e.g.*, three 3p and five three 3d orbitals. Hence, these elements show maximum covalence greater than four. Following questions can be answered :
 - (i) Nitrogen (N) does not form pentahalide while P forms PCl_5 , PF_5 and PF_6^- . Why ?
 - (ii) Sulphur (S) forms SF_6 but oxygen does not form OF_6 . Why ?
 - (iii) Though nitrogen forms pentoxide but it does not form pentachloride. Why ?
 - (iv) Fluorine forms only one oxoacid while other halogens form a number of oxoacids. Why ?
2. The first member of p-block elements displays greater ability to form $p\pi$ - $p\pi$ bond(s) with itself, (*e.g.*, $\text{C}=\text{C}$, $\text{C}\equiv\text{C}$, $\text{N}=\text{N}$, $\text{N}\equiv\text{N}$) and with the other elements of second period, for example, $\text{C}=\text{O}$, $\text{C}\equiv\text{N}$, $\text{N}=\text{O}$ compared to the subsequent members of the group.

This is because p-orbitals of the heavier members are so large and diffuse that they cannot have effective sideways overlapping. Heavier members can form p π - $d\pi$ bonds with oxygen.

Nitrogen rarely forms $p\pi$ - $d\pi$ bonds with heavier elements as in case of trisilylamine $(\text{SiH}_3)_3\text{N}$.



Now, the following questions can be explained using the above mentioned reasoning :

- (i) Nitrogen forms N_2 but phosphorus forms P_4 at room temperature. Why ?
 - (ii) Oxygen exists as O_2 but sulphur as S_8 . Why ?
 - (iii) Explain why $(CH_3)_3P=O$ is known but $(CH_3)_3N=O$ is not known.
3. Due to small size and high electronegativity and presence of lone pair(s) of electrons, elements N, O, F when bonded to hydrogen atom, forms hydrogen bonds which are stronger than other intermolecular forces. This results in exceptionally high m.p. and b.p. of the compounds having N-H/O-H/F-H bonds.

Isostructural species have same number of bond pairs and lone pairs if present around the central atom in a molecule/ion. Thus, they have the same geometry/shape/structure and the same hybridisation scheme. For example, ICl_4^-/XeF_4 , BrO_3^-/XeO_3 , BH_4^-/NH_4^+ are the pairs of isostructural species.

Inert pair effect : Due to poor shielding effect of intervening d and/or f-electrons, the effective nuclear charge increases. This increased nuclear charge holds the ns^2 electrons of heavier elements strongly and the tendency of ns^2 electrons to take part in bonding is more and more restricted down the group. Consequently, more stable lower oxidation state which is two units less than higher oxidation state, becomes more and more stable than the higher oxidation state. Following questions can be explained with the help of inert pair effect :

- (i) For N and P, + 5 oxidation state is more stable than + 3 oxidation state but for Bi + 3 oxidation state is more stable than + 5. Explain why ?
- (ii) $NaBiO_3$ is a strong oxidizing agent. Why ? [*Hint* : Bi (V) is least stable.]

(iii) In group 16, stability of +6 oxidation state decreases and the stability of +4 oxidation state increases down the group. Why ?

(iv) SO_2 acts as reducing agent. Explain why ?

(v) Why is BrO_4^- a stronger oxidizing agent than ClO_4^- ?

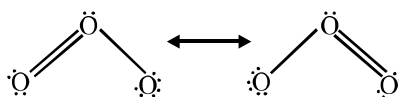
[Hint : It is because +7 oxidation state is less stable in BrO_4^- due to which Br – O bond becomes weaker.]

(vi) AsCl_5 is less stable than SbCl_5 .

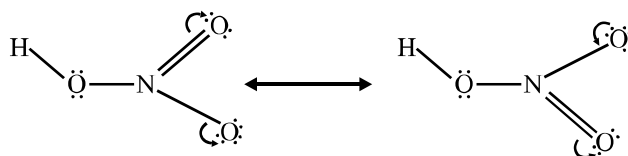
[Hint : More effective nuclear charge in As than Sb.]

(vii) The stability of highest oxidation state of 4p element is less than those of 3p and 5p elements of the same group. Why ?

Bond length : Resonance averages bond lengths. The two oxygen-oxygen bond lengths are identical in the O_3 molecule because it is resonance hybrid of following two canonical forms.



In case of HNO_3 , two nitrogen-oxygen bonds are identical and smaller than the third nitrogen-oxygen bond. This is because the third N – OH bond is not involved in resonance.

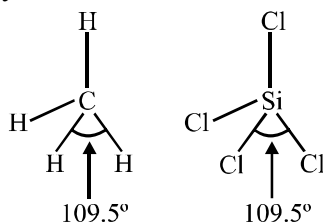


Now the following questions can be explained on the basis of this concept :

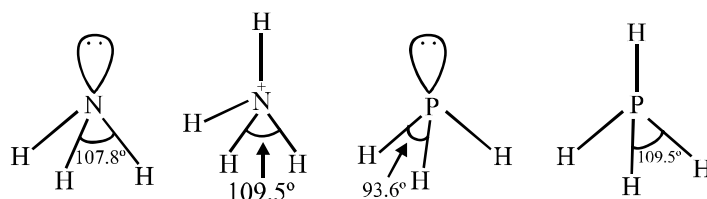
(i) In SO_2 , the two sulphur-oxygen bonds are identical. Explain why ?

(ii) In NO_3^- ion, all the three N – O bonds are identical. Why ?

Bond angle : In regular structures (where no lone pairs are present in the valence shell of the central atom in a molecule/ion), the bond angle does not depend upon the size/electronegativity of the central or terminal atoms.



In presence of lone pair(s) on the central atom, the geometry is distorted and the bond angle is changed.



Comparison of HNH and HPH bond angles

Since N is more electronegative than P, the bonding electron pair of N–H bond will shift more towards N atom than the bonding electron pair of P–H bond would shift towards P atom. This results in more bond pair-bond pair repulsion in NH₃ molecule than PH₃ molecule. Because of more lp-bp repulsion, the N–H bonds are pushed closer to a lesser extent than in PH₃. Consequently, HNH bond angle is greater than HPH angle.

Now, the following questions can be explained using the above mentioned concept :

- Bond angle in PH₄⁺ ion is higher than in PH₃. Why ?
- H–O–H bond in H₂O is greater than H–S–H angle in H₂S. Why ?

Boiling and melting points of hydrides depends upon the molar mass (or surface area) of molecules. More the molar mass, the higher is the m.p. and b.p. Hydrides forming intermolecular hydrogen bonds have exceptionally high m.p. and b.p. since intermolecular hydrogen bonds are stronger than the van der Waals forces.

Increasing order of melting point and boiling point of hydrides is as given below :

PH ₃ < AsH ₃ < SbH ₃ < NH ₃	Melting point
PH ₃ < AsH ₃ < NH ₃ < SbH ₃	Boiling point
H ₂ S < H ₂ Se < H ₂ Te < H ₂ O	Melting point and boiling point
HCl < HBr < HI < HF	Boiling point
HCl < HBr < HF < HI	Melting point

- NH₃ has higher boiling point than PH₃.
- H₂O is liquid and H₂S is gas or H₂S is more volatile than H₂O.

Thermal stability, reducing power and acid strength of hydrides depend upon bond dissociation enthalpy of E–H bond (E = group 15, group 16, and group 17 element). Due to the increase in size down the group, bond dissociation enthalpy of E–H bond decreases. Consequently, thermal stability, reducing power and acid strength of hydrides increases down the group.

The following questions can be explained using the above concepts.

Explain why :

- HF is weaker acid than HCl.
- Among hydrogen halides, HI is the strongest reducing agent.
- H_2Te is more acidic than H_2S .
- NH_3 is mild reducing agent while BiH_3 is the strongest reducing agent among the group-15 hydrides.
- H_2S is weaker reducing agent than H_2Te .

Basic nature of hydrides EH_3 of group 15 elements

All the hydrides EH_3 of group 15 elements has one lone pair of electrons. In ammonia, the lone pair of electrons is present in sp^3 hybrid orbital of the N-atom. The sp^3 hybrid orbital is directional and further N is more electronegative than H, the bond pair of N – H is shifted towards N atom which further increases the electron density on N atom. In PH_3 , the lone pair of electrons is present in large and more diffuse 3s orbital which is non-directional. As a result, PH_3 is less basic than NH_3 and basic character decreases down the group. NH_3 donates electron pair more readily than PH_3 . $(\text{SiH}_3)_3\text{N}$ has less Lewis basic nature than that of $(\text{CH}_3)_3\text{N}$ because lone pair of electrons in p-orbital of N atom in $(\text{SiH}_3)_3\text{N}$ is transferred to the vacant d-orbital of Si atom forming $\text{d}\pi\text{-p}\pi$ bond.

Covalent/Ionic Character of Halides

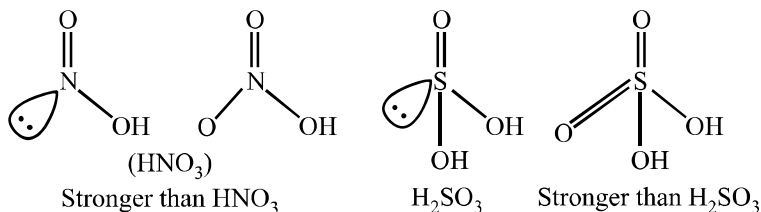
Pentahalides are more covalent than trihalides since the element (E) in higher oxidation state (+ 5) in pentahalides has more polarizing power than element (E) in lower oxidation state (+ 3) in trihalides, similarly, SnCl_4 , PbCl_2 , SbCl_3 and UF_4 respectively. Compounds having more ionic character have more m.p. and b.p. than the compounds having more covalent character.

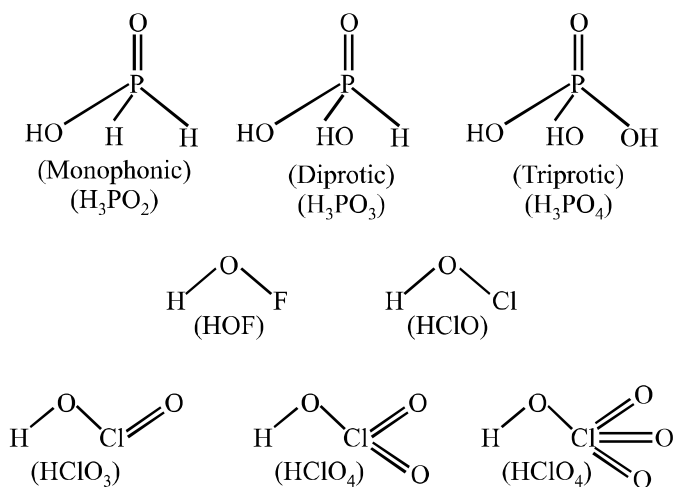
Following questions can be explained by using this concept.

Explain why :

- SnCl_2 has more b.p. than SnCl_4 .
- SbCl_5 is more covalent than SbCl_3 .
- PCl_5 has lower boiling point than that of PCl_3 .

Oxoacids of N, P and halogens :





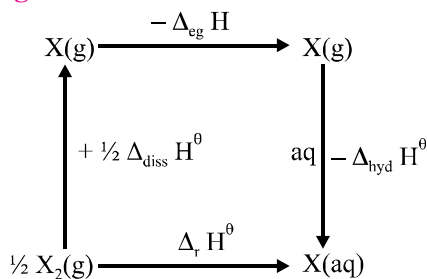
Strength of Oxo Acids

Strength of oxoacids depends upon the polarity of O–H bond which in turn, depends on the electron withdrawing power (or electronegativity) of the element E. Strength of oxoacids increases if the number of oxygen atoms bonded with E increases.

Strength of oxoacids of halogens in the same oxidation state depends on the electronegativity of the halogen. The more the electronegativity, stronger is the oxoacid.

Strength of oxoacid of a halogen in different oxidation state increases with the increase in oxidation state. This is because the stabilization of the oxoanion increases with the number of the oxygen atoms bonded to the halogen atom. More the number of oxygen atoms, the more the dispersal of –ve charge present on the oxoanion and stronger will be the oxoacid.

Oxidising Power of Halogens



The more negative the value of $\Delta_{\text{r}} \text{H}^\theta = \frac{1}{2} \Delta_{\text{diss}} \text{H}^\theta - \Delta_{\text{eg}} \text{H}^\theta - \Delta_{\text{hyd}} \text{H}^\theta$ the higher will be oxidizing property of the halogen and more positive will be standard reduction potential E_{red}^θ of the halogen.

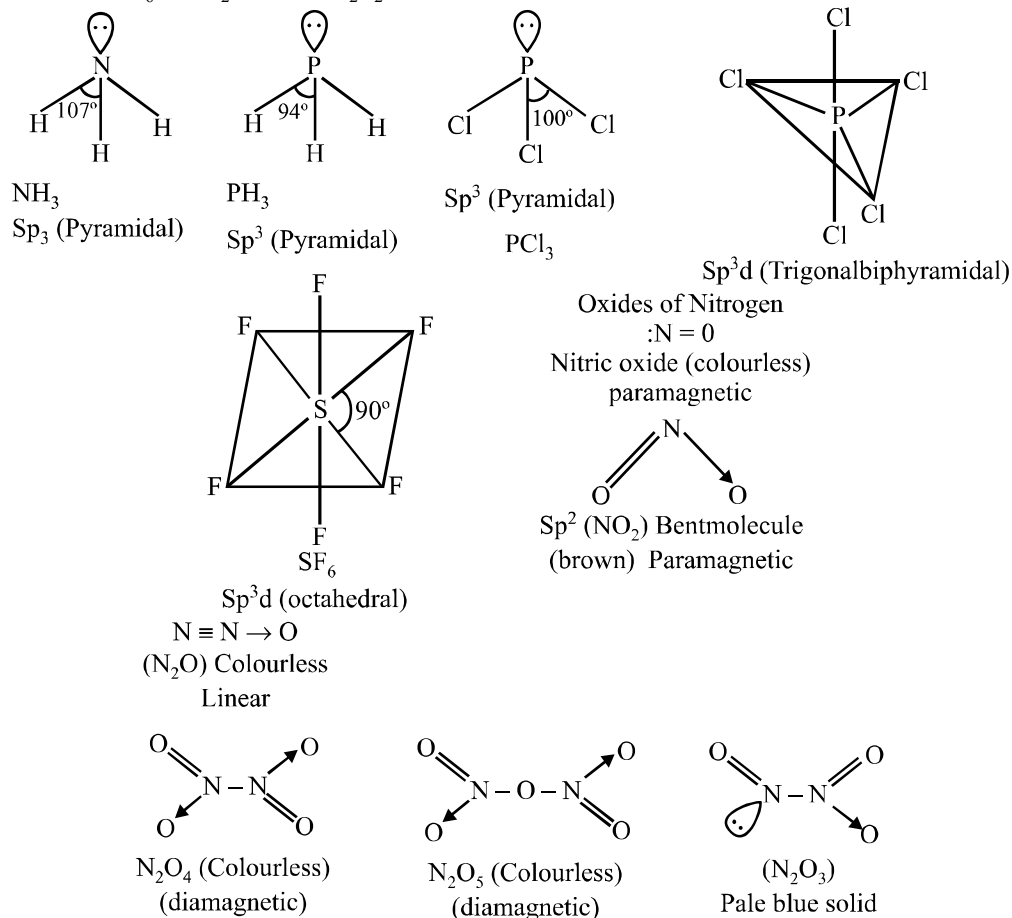
Following questions can be explained on the basis of parameters, like $\Delta_{\text{diss}} \text{H}^\theta$, $\Delta_{\text{eg}} \text{H}^\theta$ and $\Delta_{\text{hyd}} \text{H}^\theta$.

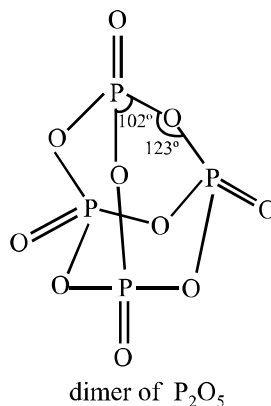
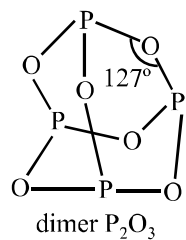
- (i) Why does F_2 have exceptionally low bond dissociation enthalpy ?
- (ii) Although electron gain enthalpy of fluorine (F) is less negative as compared to chlorine (Cl), Fluorine gas (F_2) is a stronger oxidizing agent than Cl_2 gas. Why ?

Some Important Reactions

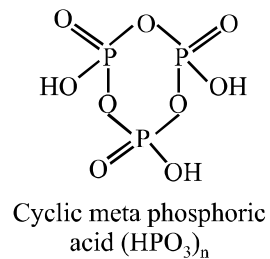
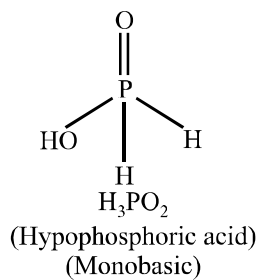
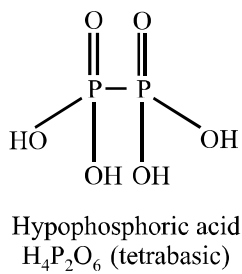
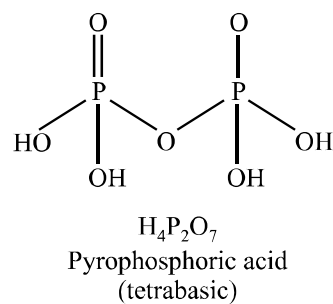
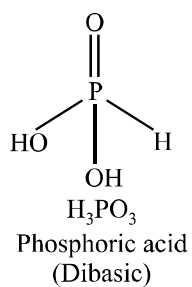
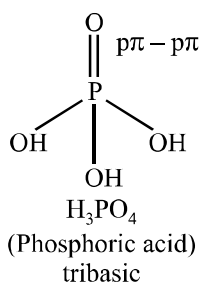
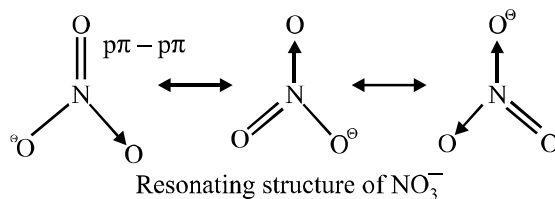
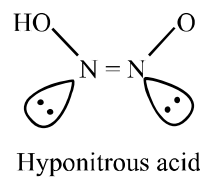
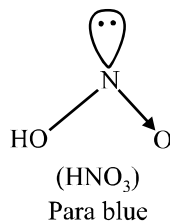
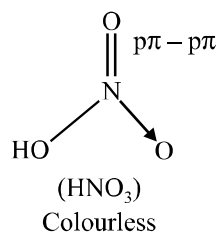
- $(NH_4)_2 Cr_2O_7 \xrightarrow{\text{Heat}} N_2 + 4H_2O + Cr_2O_3$
- $FeCl_3 (aq) + NH_4OH (aq) \rightarrow Fe_2O_3 \cdot xH_2O (s) + NH_4Cl (aq)$
- $Cu^{2+} (aq) + 4NH_3 (aq) \rightarrow [Cu(NH_3)_4]^{2+} (aq)$
- $AgCl (s) + 2NH_3 (aq) \rightarrow [Ag(NH_3)_2]Cl$
- $2Pb(NO_3)_2 \xrightarrow{673\text{ K}} 4NO_2 + 4PbO + O_2$
- $4HNO_3 + P_4O_{10} \rightarrow 4HPO_3 + 2N_2O_5$
- $3Cu + 8HNO_3 (\text{dil.}) \rightarrow 3Cu(NO_3)_2 + 2NO + 4H_2O$
- $Cu + 4HNO_3 (\text{conc.}) \rightarrow Cu(NO_3)_2 + 2NO_2 + 2H_2O$
- $4Zn + 10HNO_3 (\text{dil.}) \rightarrow 4Zn(NO_3)_2 + N_2O + 5H_2O$
- $Zn + 4HNO_3 (\text{conc.}) \rightarrow Zn(NO_3)_2 + 2NO_2 + 2H_2O$
- $I_2 + 10HNO_3 (\text{conc.}) \rightarrow 2HIO_3 + 10NO_2 + 4H_2O$
- $S_8 + 48HNO_3 (\text{conc.}) \rightarrow 8H_2SO_4 + 48NO_2 + 16H_2O$
- $P_4 + 20HNO_3 (\text{conc.}) \rightarrow 4H_3PO_4 + 20NO_2 + 4H_2O$
- Chemistry of ring test :
 $NO_3^- + 3Fe^{2+} + 4H^+ \rightarrow NO + 3Fe^{3+} + 2H_2O$
 $[Fe(H_2O)_6]^{2+} + NO \rightarrow [Fe(H_2O)_5NO]^{2+} + H_2O$
- $P_4 + 3NaOH + 3H_2O \rightarrow PH_3 + 3NaH_2PO_2$
- $P_4 + 8SOCl_2 \rightarrow 4PCl_3 + 4SO_2 + 2S_2Cl_2$
- $P_4 + 10SO_2Cl_2 \rightarrow 4PCl_5 + 10SO_2$
- $PCl_3 + 3H_2O \rightarrow H_3PO_3 + 3HCl$
- $PCl_5 + 4H_2O \rightarrow H_3PO_4 + 3HCl$
- $4H_3PO_3 \xrightarrow{\text{heat}} 3H_3PO_4 + PH_3$
- $4HCl + O_2 \xrightarrow{CuCl_2} 2Cl_2 + 2H_2O$
- $2Fe^{3+} + SO_2 + 2H_2O \rightarrow 2Fe^{2+} + SO_4^{2-} + 4H^+$
- $5SO_2 + 2MnO_4^- + 2H_2O \rightarrow 5SO_4^{2-} + 4H^+ + 2Mn^{2+}$
- $2F_2 (g) + 2H_2O (l) \rightarrow 4H^+ (aq) + 4F^- (aq) + O_2 (g)$
- $X_2 (g) + H_2O (l) \rightarrow HX (aq) + HXO (aq) (X = Cl, Br)$
- $4I^- (aq) + 4H^+ (aq) + O_2 \rightarrow 2I_2 (s) + 2H_2O (l)$

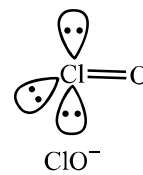
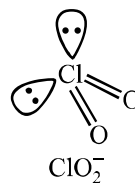
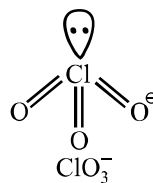
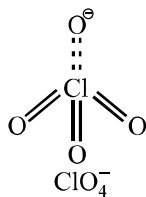
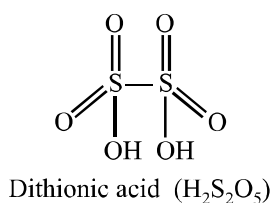
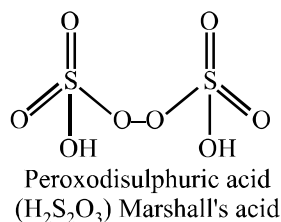
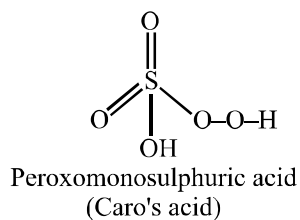
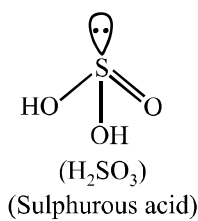
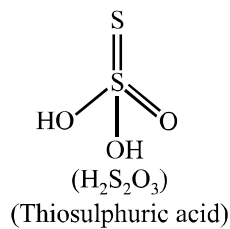
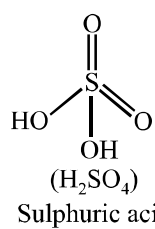
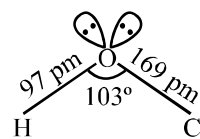
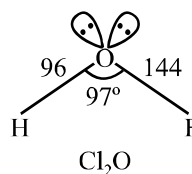
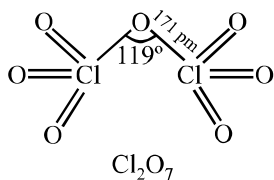
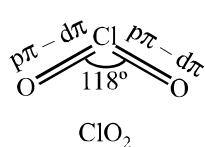
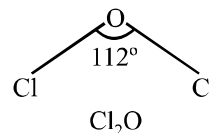
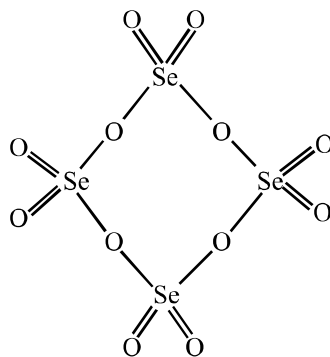
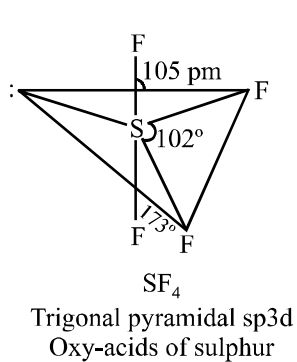
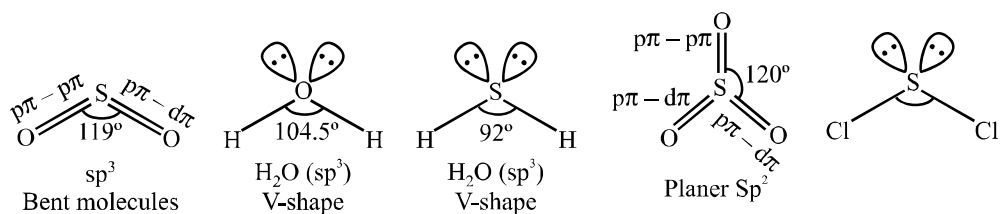
27. $\text{MnO}_2 + 4\text{HCl} \rightarrow \text{MnCl}_2 + \text{Cl}_2 + 2\text{H}_2\text{O}$
28. $2\text{NaOH (dil)} + \text{X}_2 \xrightarrow{\text{Cold}} \text{NaX} + \text{NaOX} + \text{H}_2\text{O}$
29. $6\text{NaOH (conc)} + 3\text{X}_2 \xrightarrow{\text{heat}} 5\text{NaX} + \text{NaXO}_3 + 3\text{H}_2\text{O}$ ($\text{X}_2 = \text{Cl}_2, \text{Br}_2, \text{I}_2$)
30. $2\text{Ca(OH)}_2 + 2\text{Cl}_2 \rightarrow \text{Ca(OCl)}_2 + \text{CaCl}_2 + 2\text{H}_2\text{O}$
31. $\text{NaCl} + \text{H}_2\text{SO}_4 \xrightarrow{\text{heat}} \text{NaHSO}_4 + \text{HCl}$
32. $\text{XeF}_2 + \text{PF}_5 \rightarrow [\text{XeF}]^+[\text{PF}_6]^-$
33. $\text{XeF}_6 + \text{MF} \rightarrow \text{M}^+[\text{XeF}_7]^-$ ($\text{M} = \text{Na, K, Rb or Cs}$)
34. $6\text{XeF}_4 + 12\text{H}_2\text{O} \rightarrow 4\text{Xe} + 2\text{XeO}_3 + 24\text{HF} + 3\text{O}_2$
35. $\text{XeF}_6 + 3\text{H}_2\text{O} \rightarrow \text{XeO}_3 + 6\text{HF}$
36. $\text{XeF}_6 + \text{H}_2\text{O} \rightarrow \text{XeOF}_4 + 2\text{HF}$
37. $\text{XeF}_6 + 2\text{H}_2\text{O} \rightarrow \text{XeO}_2\text{F}_2 + 4\text{HF}$

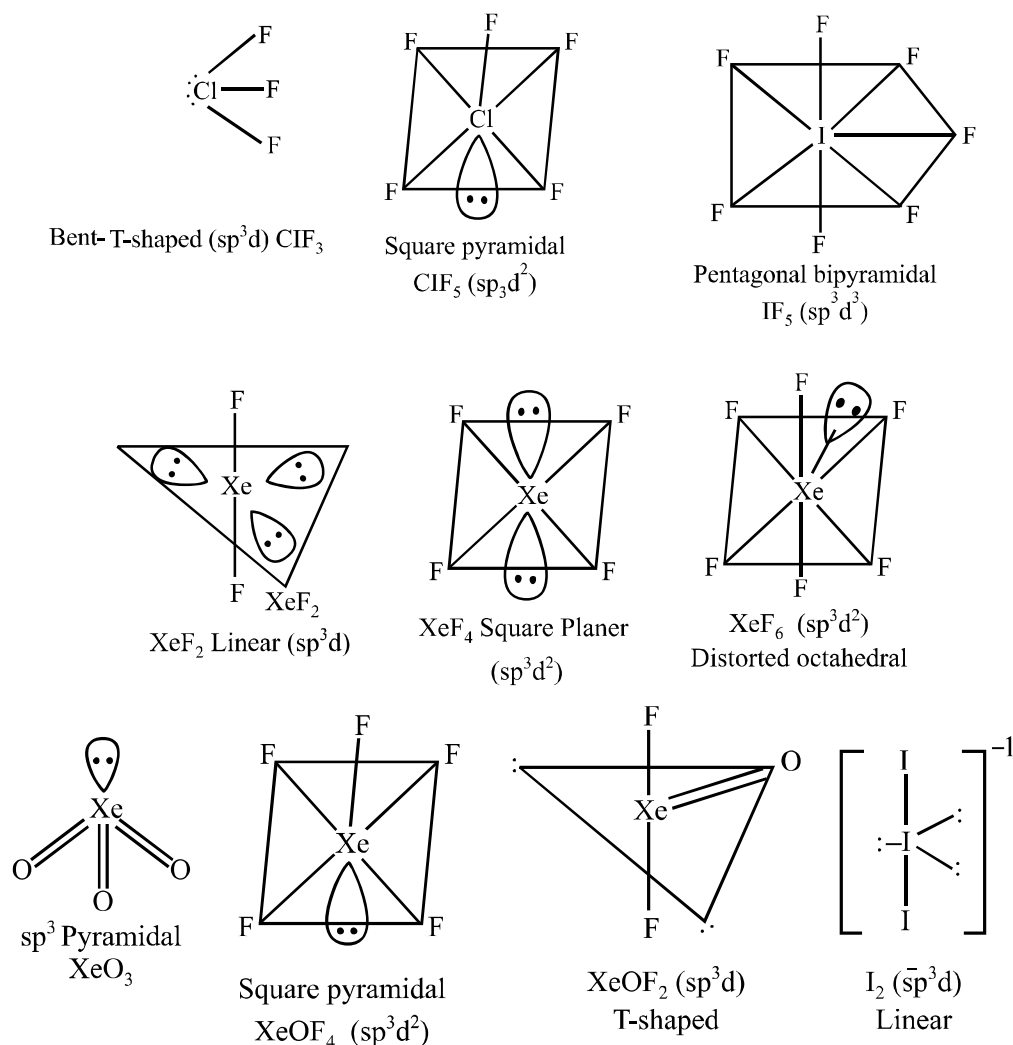




Oxy-acids of Nitrogen







VERY SHORT ANSWER TYPE QUESTIONS (1 Mark)

Q. 1. In group 15 elements, there is considerable increase in covalent radius from N to P but small increase from As to Bi. Why ?

[Hint : Due to completely filled d- and/or f-orbitals in As, Sb and Bi.]

Q. 2. The tendency to exhibit – 3 oxidation state, decreased down the group in group 15 elements. Explain.

[Hint : Due to increase in size and decrease in electronegativity down the groups.]

Q. 3. Maximum covalence of nitrogen is '4' but the heavier elements of group 15 show covalence greater than '4'. Why ?

[Hint : Nitrogen is not having vacant d- orbitals in its octet, hence cannot expand its octet, while heavier members have vacant d-orbitals to expand their octet.]

- Q. 4. Nitrogen exists as a diatomic molecule with a triple bond between the two atoms, whereas the heavier elements of the group do not exist as E_2 at room temperature. Assign a reason.**

[Hint : p-p multiple bonds are formed by N due to its small size.]

- Q. 5. The ionization enthalpies of group 15 elements are higher than those of corresponding members of group 14 and 16 elements. Assign the reason.**

[Hint : Due to their stable electronic configuration (ns^2np^3).]


- Q. 6. The boiling point of PH_3 is lesser than NH_3 . Why ?**

[Hint : NH_3 molecules are stabilized by intermolecular H-bonding, while PH_3 by weak van der Waals's forces.]

- Q. 7. NO_2 dimerises to form N_2O_4 . Why ?**

[Hint : Due to presence of odd electron on N.]

- Q. 8. Draw the structure of N_2O_5 molecule.**



- Q. 9. How does ammonia solution react with Ag^+ (aq) ? Write the balanced chemical equation.**

[Hint : Ag^+ (aq) + $2NH_3$ (aq) \rightarrow $[Ag(NH_3)_2]^+$ (aq)]

- Q. 10. Why does NH_3 forms intermolecular hydrogen bonds whereas PH_3 does not ?**

[Hint : Due to strong electronegativity, small size of nitrogen atom and presence of lone pair of electrons on N atom.]

- Q. 11. Write disproportionation reaction of H_3PO_3 ?**

[Hint : $4H_3PO_3 \rightarrow 3H_3PO_4 + PH_3$]

- Q. 12. How does NH_3 acts as a complexing agent ?**

[Hint : Metal hydroxides are dissolved in excess of NH_4OH . Ammonia acts as a Lewis base. It can donate electron pair to central metal atom or ion.]

- Q. 13. Write the reaction of PCl_5 with heavy water.**

[Hint : $PCl_5 + D_2O \rightarrow POCl_3 + 2DCl$]

- Q. 14. What is laughing gas ? How is it prepared ?**

[Hint : $N_2O, NH_4NO_3 \rightarrow N_2O + 2H_2O$]

SHORT ANSWER-I TYPE QUESTIONS (2 Marks)

Complete the following reactions :

1. (i) $(\text{NH}_4)_2\text{G}_2\text{O}_7 \xrightarrow{\text{heat}}$
 (ii) $\text{NH}_4\text{Cl (aq)} + \text{NaNO}_2 \text{ (aq)} \rightarrow$
2. (i) $\text{NH}_2\text{CONH}_2 + \text{H}_2\text{O} \rightarrow$
 (ii) $\text{FeCl}_3 \text{ (aq)} + \text{NH}_4\text{OH (aq)} \rightarrow$
3. (i) $\text{Ca}_3\text{P}_2 + \text{H}_2\text{O (l)} \rightarrow$
 (ii) $\text{I}_2 + \text{HNO}_3 \text{ (conc.)} \rightarrow$
4. (i) $\text{Ba(N}_3)_2 \xrightarrow{\text{heat}}$
 (ii) $4\text{H}_3\text{PO}_3 \xrightarrow{\text{heat}}$
5. (i) $\text{PH}_4\text{I} + \text{KOH} \rightarrow$
 (ii) $\text{HgCl}_2 + \text{PH}_3 \rightarrow$
6. (i) $\text{PCl}_3 + 3\text{H}_2\text{O} \rightarrow$
 (ii) $\text{PCl}_5 + \text{H}_2\text{O} \rightarrow$
7. (i) $\text{NO}_3^- + \text{Fe}^{2+} + \text{H}^+ \rightarrow$
 (ii) $\text{Zn} + \text{HNO}_3 \text{ (dil.)} \rightarrow$
8. (i) $\text{Zn} + \text{HNO}_3 \text{ (conc.)} \rightarrow$
 (ii) $\text{P}_4 + \text{HNO}_3 \text{ (conc.)} \rightarrow$
9. (i) $\text{NH}_3 + \text{O}_2 \xrightarrow[500\text{K, 9 bar}]{\text{pt/Rh}}$
 (ii) $\text{P}_4 + \text{NaOH} + \text{H}_2\text{O} \rightarrow$
10. (i) $\text{NH}_3 \text{ (excess)} + \text{Cl}_2 \rightarrow$
 (ii) $\text{NH}_3 + \text{Cl}_2 \text{ (excess)} \rightarrow$
11. (i) $\text{P}_4 + \text{HNO}_3 \text{ (conc.)} \rightarrow$
 (ii) $\text{Cu} + \text{HNO}_3 \text{ (conc.)} \rightarrow$

Q. 12. Why is red phosphorus denser and less chemically reactive than white phosphorus ?

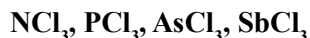
[Hint : Because it has polymeric structure consisting of chains of P_4 tetrahedra, hence denser than white P while red P is not having angular strain as in white P, hence less reactive than white P.]

- Q. 13. (i) The acidic character of hydrides of group 15 increases from NH_3 to BiH_3 . Why ?**
- (ii) Phosphorus shows marked tendency for catenation. Why ?**

[Hint : (i) Because from NH_3 to BiH_3 thermal stability decreases hence acidic character increases from NH_3 to BiH_3 .

(ii) Because phosphorus do not form $p\pi-p\pi$ multiple bond due to its bigger size.]

Q. 14. Arrange the following trichlorides in decreasing order of bond angle :



[Hint : $\text{NCl}_3 < \text{PCl}_3 < \text{AsCl}_3 < \text{SbCl}_3$]

Q. 15. How many P – O – P bonds are there in (i) $\text{H}_4\text{P}_2\text{O}_7$ (ii) P_4O_{10} ?

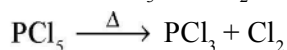
[Hint : (i) $\text{H}_4\text{P}_2\text{O}_7 = 01$ (ii) $\text{P}_4\text{O}_{10} = 05$]

Q. 16. At low temperature, NO_2 becomes colourless. Why ?

[Hint : NO_2 gets condensed to N_2O_4 .]

Q. 17. Give chemical reaction in support of the statement that all the bonds in PCl_5 molecule are not equivalent.

[Hint : PCl_5 dissociates into PCl_3 and Cl_2 on heating.]



Q. 18. (i) What is the covalency of N in N_2O_5 ?

(ii) Explain why phosphorus forms pentachloride whereas nitrogen and bismuth do not ?

[Hint : (i) 4

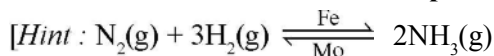
(ii) Because due to presence of vacant d-orbitals in the octet of 'p', it can expand its octet to form PCl_5 , while N cannot expand its octet.]

Q. 19. Arrange the following in the decreasing order of their basicity. Assign the reason :



[Hint : $\text{NH}_3 > \text{PH}_3 > \text{AsH}_3 > \text{SbH}_3 > \text{BiH}_3$]

Q. 20. Write the conditions that favour the formation of ammonia gas along with the reactions involved in Haber's process.

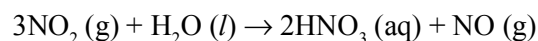
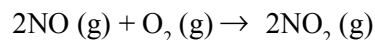
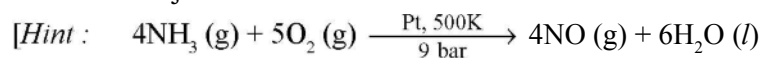


(i) High pressure (200 atm).

(ii) Moderate temperature (700 K).

(iii) Presence of catalyst Fe/FeO, with small amount of K_2O and Al_2O_3 to increase the rate of attainment of equilibrium.]

Q. 21. Explain the Ostwald's process to manufacture nitric acid. Give any two uses of HNO₃.



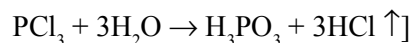
(68% by mass)

Uses : (i) Used in the manufacture of fertilizers, explosives.

(ii) Used as lab reagent.]

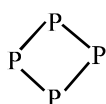
Q. 22. Why does PCl₃ fumes in moisture ? Give reaction also.

[Hint : PCl₃ hydrolyses in the presence of moisture giving fumes of HCl.

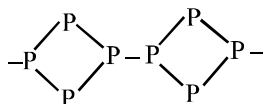


Q. 23. Draw the structure of white phosphorus and red phosphorus. Which one of these two types of phosphorus is more reactive and why ?

[Hint : White phosphorus exists as discrete P₄ tetrahedral molecule, while red phosphorus is polymeric consisting of chains of P₄ tetrahedra linked together.



White P



Red P

White P is more reactive than red P, due to angular strain in it.]

SHORT ANSWER-II TYPE QUESTIONS (3 Marks)

Q. 1. (i) How is HNO₃ prepared commercially ?

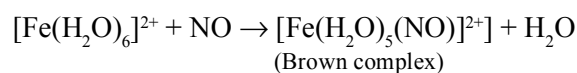
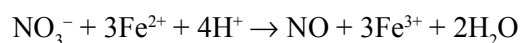
(ii) Write chemical equations of the reactions involved.

(iii) What concentration by mass of HNO₃ can be obtained ?

[Hint : Refer to Q. 21 SA-I type]

Q. 2. An unknown salt X reacts with hot conc. H₂SO₄ to produce a brown coloured gas which intensifies on addition on copper turnings. On adding dilute ferrous sulphate solution to an aqueous solution of X and then carefully adding conc. H₂SO₄ along the sides of the test tube, a brown complex Y is formed at the interface between the solution and H₂SO₄. Identify X and Y and write the chemical equation involved in the reaction.

[Hint : X = NO₃⁻ salt,] [Y = [Fe(H₂O)₅(NO)]²⁺]



Q. 3. Explain each of the following :

- (i) The bond angles (O–N–O) are not of the same value in NO_2^- and NO_2^+ .
- (ii) BiH_3 is the strongest reducing agent amongst all the hydrides of group 15 elements.
- (iii) Ammonia has greater affinity for protons than phosphine.

[Hint : (i) Due to presence of lone pair of electron on N in NO_2^- .

- (ii) Bi–H bond dissociation enthalpy is least and releases hydrogen most easily.
- (iii) NH_3 is stronger Lewis base than PH_3 .]

Q. 4. Write balanced equation for the following reactions :

- (i) Zn is treated with dilute HNO_3 .
- (ii) Copper metal with conc. HNO_3 .
- (iii) Iodine is treated with conc. HNO_3 .

[Hint : (i) $4\text{Zn} + 10\text{HNO}_3$ (dil.) $\rightarrow 4\text{Zn}(\text{NO}_3)_2 + 5\text{H}_2\text{O} + \text{N}_2\text{O}$

(ii) $3\text{Cu} + 8\text{HNO}_3$ (dil.) $\rightarrow 3\text{Cu}(\text{NO}_3)_2 + 2\text{NO} + 4\text{H}_2\text{O}$

(iii) $\text{I}_2 + 10\text{HNO}_3$ (conc.) $\rightarrow 2\text{HIO}_3 + 10\text{NO}_2 + 4\text{H}_2\text{O}$]

Q. 5. A translucent white waxy solid (A) on heating in an inert atmosphere is converted to its allotropic form (B). Allotrope (A) on reaction with very dilute aqueous NaOH liberates a highly poisonous gas (C) having a rotten fish smell. (A) with excess of chlorine forms (D) which hydrolyses to form compound (E). Identify the compounds (A) to (E).

[Hint : A : White phosphorus, B : Red phosphorus, C : PH_3 , D : PCl_5 , E : H_3PO_4]

Q. 6. Assign the appropriate reason for the following :

- (i) Nitrogen exists as diatomic molecule and phosphorus as P_4 at room temperature. Why ?
- (ii) Why does $\text{R}_3\text{P}=\text{O}$ exist but $\text{R}_3\text{N}=\text{O}$ does not ? (R = an alkyl group).
- (iii) Why is N_2 unreactive at room temperature ?

[Hint : (i) Due to its small size and high electronegativity, N forms $p\pi - p\pi$ multiple bond ($\text{N} \equiv \text{N}$) whereas P does not form $p\pi - p\pi$ bonds but forms P–P single bond.

- (ii) In $\text{R}_3\text{N}=\text{O}$, N should have a covalence of 5 so the compound $\text{R}_3\text{N}=\text{O}$ does not exist since maximum covalence shown by N cannot exceed 4.]

GROUP 16 ELEMENTS

VERY SHORT ANSWER TYPE QUESTIONS (1 Mark)

Q. 1. Explain why SF_4 is easily hydrolysed, whereas SF_6 is resistant to hydrolysis ?

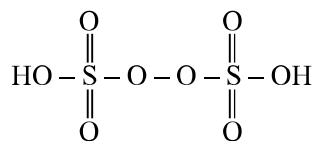
[Hint : Water molecule cannot attack 'S' atom due to steric hinderance and 'S' atom is also coordinately saturated in SF_6 molecule.]

Q. 2. In group 16, the stability of + 6 oxidation state decreases and that of + 4 oxidation state increases down the group. Why ?

[Hint : Due to inert pair effect.]

Q. 3. Draw the structure of $\text{H}_2\text{S}_2\text{O}_8$ and find the number of S – S bond, if any.

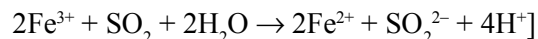
[Hint :



Number of S – S bond \Rightarrow 0.]

Q. 4. What happens when sulphur dioxide gas is passed through an aqueous solution of a Fe(III) salt ?

[Hint : It converts Fe^{3+} ions to Fe^{2+} ions.

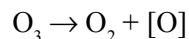


Q. 5. All the bonds in SF_4 are not equivalent. Why ?

[Hint : It is having see-saw shape. (4BP + 1LP)]

Q. 6. O_3 acts as a powerful oxidizing agent. Why ?

[Hint : Due to the ease with which it liberates atoms of nascent oxygen.]



Q. 7. Which one of the following is not oxidized by O_3 ? State the reason :

KI, FeSO_4 , K_2MnO_4 , KMnO_4

[Hint : KMnO_4 , since Mn is showing maximum oxidation state of + 7.]

Q. 8. Why does oxygen not show an oxidation state of + 4 and + 6 ?

[Hint : Due to absence of vacant d-orbitals in the octet of oxygen.]

Q. 9. Oxygen and sulphur in vapour phases are paramagnetic in nature. Explain why ?

[Hint : Due to presence of unpaired electrons in anti-bonding molecular orbitals in them.]

Q. 10. Thermal stability of hydrides of group 16 elements decreases down the group. Why ?

[Hint : Because down the group E – H bond dissociation enthalpy decreases.]

Q. 11. Why are the two S – O bonds in SO₂ molecule have equal strength ?

[Hint : Due to resonance, two S – O bonds have partial double bond character, hence have equal strength.]

Q. 12. $K_{a_2} \ll K_{a_1}$ for H₂SO₄ in water, why ?

[Hint : $\text{H}_2\text{SO}_4(\text{aq}) + \text{H}_2\text{O}(\text{l}) \rightarrow \text{H}_3\text{O}^+(\text{aq}) + \text{HSO}_4^-(\text{aq}); K_{a_1} > 10$

$\text{HSO}_4^-(\text{aq}) + \text{H}_2\text{O}(\text{l}) \rightarrow \text{H}_3\text{O}^+(\text{aq}) + \text{SO}_4^{2-}(\text{aq}); K_{a_2} = 10^{-2}$

K_{a_2} is less than K_{a_1} because HSO_4^- ion has much less tendency to donate a proton.]

Q. 13. H₂O is a liquid while inspite of a higher molecular mass, H₂S is a gas. Explain.

[Hint : H₂O molecules are stabilized by intermolecular hydrogen bonding, while H₂S by weak van der Waal's forces.]

Q. 14. The electron gain enthalpy with negative sign for oxygen (– 141 KJ mol⁻¹) is numerically less than that for sulphur (– 200 KJ mol⁻¹). Give reason.

[Hint : Due to smaller size of oxygen than sulphur electron-electron repulsion is more in oxygen than sulphur.]

Q. 15. Dioxygen O₂ is a gas while sulphur (S₈) is a solid. Why ?

[Hint : Because oxygen is smaller in size hence have capacity to form pπ-pπ multiple bond, exists as dioxygen (O₂), whereas due to bigger size sulphur do not form multiple bond and exist as S₈.]

Q. 16. In the preparation of H₂SO₄ by contact process, why is SO₃ not absorbed directly in water to form H₂SO₄ ?

[Hint : Because it forms a dense fog of sulphuric acid which does not condense easily.]

SHORT ANSWER-I TYPE QUESTIONS (2 Marks)

Q. 1. Write the chemical equations of the following reactions :

(a) Glucose is heated with conc. H₂SO₄.

(b) Sodium nitrate is heated with conc. H₂SO₄.

[Hint : (a)

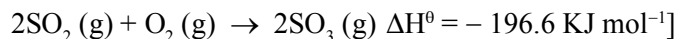
(b) $\text{NaNO}_3 + \text{H}_2\text{SO}_4 \rightarrow \text{NaHSO}_4 + \text{HNO}_3$]

Q. 2. Mention the favourable conditions for the manufacture of sulphuric acid by contact process.

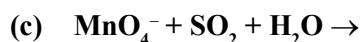
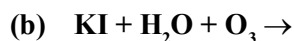
[Hint : (i) Low temperature (operating temperature is 720 K).

(ii) High pressure (2 bar).

(iii) Presence of catalyst (V_2O_5).



Q. 3. Complete the following reactions :



Q. 4. Explain why :

(a) H_2S is more acidic than H_2O .

(b) Two S – O bonds in SO_2 are identical.

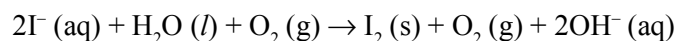
(c) SF_6 is inert and stable but SF_4 is reactive.

(d) Sulphur has greater tendency for catenation than oxygen.

[Hint : (iii) Because six F atoms protect the sulphur atom from attack by any reagent due to steric hindrance but four F atoms in SF_4 cannot offer much steric hindrance, hence reactive.]

Q. 5. How is O_3 estimated quantitatively ?

[Hint : O_3 reacts with an excess of KI solution buffered with a borate buffer, I_2 is liberated which is titrated against standard solution of sodium thiosulphate.]



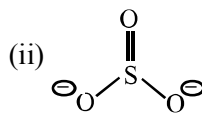
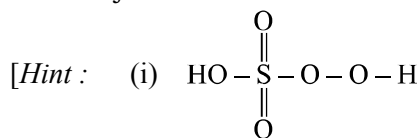
Q. 6. Explain why O_3 is thermodynamically less stable than O_2 ?

[Hint : Because O_3 is endothermic compound/decomposition of O_3 is exothermic and ΔG is negative/decomposition of O_3 is spontaneous.]

Q. 7. Draw the structure of :

(i) H_2SO_5

(ii) SO_3^{2-}

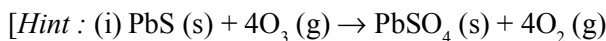


SHORT ANSWER-II TYPE QUESTIONS (3 Marks)

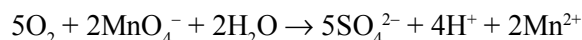
Q. 1. (i) How does O_3 react with lead sulphide ? Write chemical equation.

(ii) What happens when SO_2 is passed in acidified $KMnO_4$ solution ?

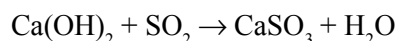
(iii) SO_2 behaves with lime water similar to CO_2 . Explain why ?



(ii) It decolourises acidified $KMnO_4$ solution.

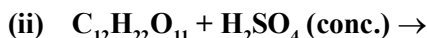


(iii) It turns lime water milky due to the formation of insoluble $CaSO_3$.

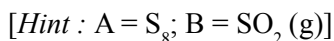


(milky)

Q. 2. Complete the reactions :



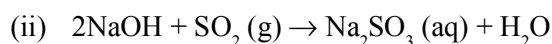
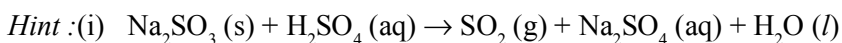
Q. 3. An amorphous solid 'A' burns in air to form a gas 'B' which turns lime water milky. The gas is also produced as a by-product during roasting of sulphide ore. This gas decolourises acidified aq. $KMnO_4$ solution. Identify the solid 'A' and the gas 'B' and write the reaction involved.



(i) How is SO_2 prepared in laboratory ?

(ii) What happens when SO_2 is passed through water and reacts with $NaOH$? Write balanced equation.

(iii) Write its any two uses.



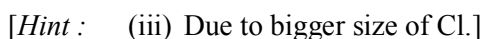
(iii) It is used as bleaching agent and disinfectant.

Q. 4. Assign reason for the following :

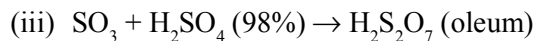
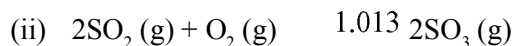
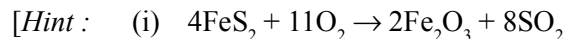
(i) Sulphur in vapour state exhibits paramagnetism.

(ii) H_2O is less acidic than H_2Te .

(iii) In spite of having same electronegativity, oxygen forms hydrogen bond while chlorine does not.



Q. 5. Write contact process for the manufacture of king of chemicals.



GROUP 17 ELEMENTS

VERY SHORT ANSWER TYPE QUESTIONS (1 Mark)

Q. 1. Explain why fluorine forms only one oxoacid, HOF.

[Hint : Because of unavailability of d-orbitals in its valence shell.]

Q. 2. Why HF is the weakest acid and HI is the strongest ?

[Hint : $K_a(\text{HF}) = 7 \times 10^{-4}$ $K_a(\text{HI}) = 7 \times 10^{11}$

Intermolecular H-bonds in H – F and high bond dissociation enthalpy of H – F makes it weakest and weak bond in H – I makes it strongest.]

Q. 3. Explain why halogens are strong oxidizing agents.

[Hint : High electronegativity and more negative electron gain enthalpies of halogens.]

Q. 4. I_2 is more soluble in KI than in water. Why ?

[Hint : $\text{KI} + \text{I}_2 \rightarrow \text{KI}_3$]

Q. 5. What is cause of bleaching action of chlorine water ? Explain it with chemical equation.

[Hint : Formation of nascent oxygen.]

Q. 6. Electron gain enthalpy of fluorine (F) is less negative than that of chlorine (Cl). Why ?

[Hint : Due to small size of F atom and compact 2p orbitals there are strong interelectronic repulsions in the relatively smaller 2p orbitals of fluorine. So the incoming electron does experience more repulsion in F than in Cl.]

Q. 7. Why can't we prepare HBr by heating KBr with sulphuric acid ?

[Hint : As HBr readily reduces H_2SO_4 forming Br_2 .]

Q. 8. Explain why : ICl is more reactive than I_2 ?

[Hint : Because I – Cl bond is weaker than I – I bond.]

Q. 9. Which oxide of iodine is used for the estimation of carbon mono oxide ?

[Hint : I_2O_5]

Q. 10. Arrange the following oxoacids of chlorine in increasing order of acid strength :



[Hint : $\text{HOCl} < \text{HOCIO} < \text{HOCIO}_2 < \text{HOCIO}_3$]

Q. 11. Why does fluorine not play the role of a central atom in interhalogen compounds ?

[Hint : Due to smallest size of F.]

Q. 12. Fluorine exhibit only – 1 oxidation state whereas other halogens exhibit +ve oxidation states also. Explain why ?

[Hint : Due to absence of vacant d-orbitals in the octet of F.]

Q. 13. ClF_3 exists but FCl_3 does not. Why ?

[Hint : Because F does not show oxidation state other than – 1.]

Q. 14. Despite lower value of its electron enthalpy with negative sign, fluorine is a stronger oxidizing agent than chlorine. Explain.

[Hint : Due to its low bond dissociation enthalpy (F–F bond) and high hydration enthalpy of F^- .]

Q. 15. ClF_3 molecule has a bent T-shaped structure and not a trigonal planar structure. Explain.

[Hint : Due to presence of 2LP and 3BP.]

Q. 16. What happens when NaCl is heated with H_2SO_4 in the presence of MnO_2 ?

[Hint : $4\text{NaCl} + \text{MnO}_2 + 4\text{H}_2\text{SO}_4 \rightarrow \text{MnCl}_2 + 4\text{NaHSO}_4 + 2\text{H}_2\text{O} + \text{Cl}_2$]

Q. 17. With what neutral molecule ClO^- is isoelectronic ?

[Hint : ClF or OF_2 .]

Q. 18. Why HF acid is stored in wax coated glass bottle ?

[Hint : HF is corrosive, hence HF attacks glass surface.]

Q. 19. Bond dissociation enthalpy of F_2 is less than that of Cl_2 . Explain why ?

[Hint : F_2 is having higher electron-electron repulsion due to its smaller size, as compared to Cl_2 .]

SHORT ANSWER-I TYPE QUESTIONS (2 Marks)

Q. 1. (i) Interhalogen compounds are more reactive than halogens except F_2 . Why ?

(ii) Give one important use of ClF_3 .

[Hint : (i) Because X – X bond in interhalogens is weaker than X – X bond in halogens except F – F bond.

(ii) ClF_3 is used for the production of UF_6 .]

- Q. 2. (i) Write the composition of bleaching powder.**
(ii) What happens when NaCl is heated with conc. H_2SO_4 in the presence of MnO_2 . Write the chemical equation.

[Hint : (i) $\text{Ca(OCl)}_2 \cdot \text{CaCl}_2 \cdot \text{Ca(OH)}_2 \cdot 2\text{H}_2\text{O}$]

- Q. 3. A colourless pungent smelling gas, which easily liquefies to a colourless liquid and freezes to a white crystalline solid, gives dense white fumes with ammonia. Identify the gas and write the chemical equation for its laboratory preparation.**

[Hint : $\text{NaCl} + \text{H}_2\text{SO}_4$ (conc.) \rightarrow $\text{NaHSO}_4 + \text{HCl}$]

- Q. 4. NO_2 readily dimerise, whereas ClO_2 does not. Why ?**

[Hint : Due to bigger size of Cl than N.]

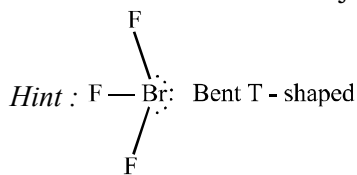
- Q. 5. Compare the oxidizing powers of F_2 and Cl_2 on the basis of bond dissociation enthalpy, electron gain enthalpy of halogens and hydration enthalpy of halide ions.**

[Hint : It is due to low enthalpy of dissociation of F – F bond and high hydration enthalpy of F^- .]

- Q. 6. Which fluorinating agent are oftenly used instead of F_2 ? Write chemical equation showing their use as fluorinating agents.**

[Hint : $\text{U (s)} + 3\text{ClF}_3$ (l) \rightarrow UF_6 (g) + 3ClF (g)]

- Q. 7. Draw the structure of BrF_3 .**

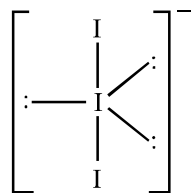


Complete the following reactions :

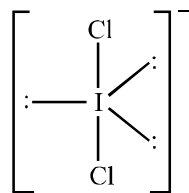
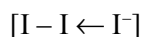
- 8. (i) Al_2O_3 (s) + NaOH (aq) + H_2O (l) \rightarrow**
(ii) $\text{HCl} + \text{O}_2 \rightarrow$
- 9. (i) $\text{Ca(OH)}_2 + \text{Cl}_2 \rightarrow$**
(ii) N_2 (excess) + $\text{Cl}_2 \rightarrow$
- 10. (i) $\text{Na}_2\text{SO}_3 + \text{Cl}_2 + \text{H}_2\text{O} \rightarrow$**
(ii) $\text{N}_2 + \text{Cl}_2$ (excess) \rightarrow

11. (i) $\text{Cl}_2 + \text{NaOH}$ (cold & dil.) \rightarrow
 (ii) $\text{Cl}_2 + \text{NaOH}$ (hot & conc.) \rightarrow
12. (i) $\text{Fe} + \text{HCl} \rightarrow$
 (ii) $\text{Cl}_2 + \text{F}_2$ (excess) \rightarrow
13. (i) $\text{U} + \text{ClF}_3 \rightarrow$
 (ii) $\text{FeSO}_4 + \text{H}_2\text{SO}_4 + \text{Cl}_2 \rightarrow$
- Q. 14. Draw the structure of : (a) I_3^- (b) ICl_2^- .

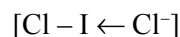
Hint :



Linear



Linear



SHORT ANSWER-II TYPE QUESTIONS (3 Marks)

Q. 1. Give appropriate reason for each of the following :

- (i) Metal fluorides are more ionic than metal chlorides.
 (ii) Perchloric acid is stronger than sulphuric acid.
 (iii) Addition of chlorine to KI solution gives it a brown colour but excess of Cl_2 makes it colourless.

[Hint : (i) According to Fajan's Rule, bigger ions are more polarized than the smaller ions by a particular cation.

- (ii) ClO_4^- is more resonance stabilized than SO_4^{2-} since dispersal of negative charge is more effective in ClO_4^- as compared with SO_4^{2-} .

- (iii) $2\text{KI} + \text{Cl}_2 \rightarrow 2\text{KCl} + \text{I}_2$



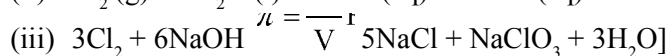
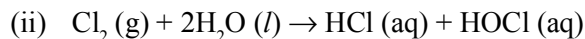
(colourless)

Q. 2. X_2 is a greenish yellow gas with pungent offensive smell used in purification of water. It partially dissolves in H_2O to give a solution which turns blue litmus red. When X_2 is passed through NaBr solution, Br_2 is obtained.

- (i) Identify X_2 , name the group to which it belongs.
 (ii) What are the products obtained when X_2 reacts with H_2O ? Write chemical equation.

(iii) What happens when X_2 reacts with hot and conc. NaOH ? Give equation.

[Hint : (i) Cl_2 , 17 group.



Q. 3. Arrange the following in the order of the property indicated for each set :

(i) F_2, Cl_2, Br_2, I_2 (Increasing bond dissociation energy)

(ii) HF, HCl, HBr, HI (decreasing acid strength)

(iii) $NH_3, PH_3, AsH_3, SbH_3, BiH_3$ (Decreasing base strength)

[Hint : (i) F_2 has exceptionally low bond dissociation enthalpy. Lone pairs in F_2 molecule are much closer to each other than in Cl_2 molecule. Stronger electron-electron repulsions among the lone pairs in F_2 molecule make its bond dissociation enthalpy exceptionally low.

(ii) Acid strength depends upon H – X bond dissociation enthalpy. As the size of ‘X’ atom increases, bond dissociation enthalpy of H – X decreases.

(iii) Electron availability on the central atom ‘E’ in EH_3 decreases down the group.]

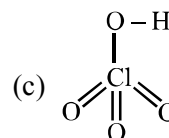
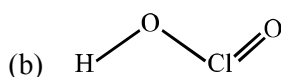
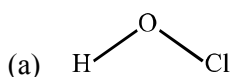
Q. 4. Draw the structure of :

(i) Hypochlorous acid

(ii) Chlorous acid

(iii) Perchloric acid

Hint :



Q. 5. Which is more acidic among $HClO_4$ and HIO_4 ? Why ?

[Hint : $HClO_4$ is more acidic than HIO_4 . Because Cl is more electronegative than Br, due to which ClO_3 group have more tendency to withdraw electrons of O – H bond towards itself as compared to BrO_3 group.]

GROUP 18 ELEMENTS

VERY SHORT ANSWER TYPE QUESTIONS (1 Mark)

Q. 1. What inspired N. Barlett for carrying out reaction between Xe and PtF_6 ?

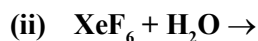
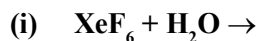
[Hint : Almost same ionization enthalpy of oxygen and Xe.]

- Q. 2. Predict the shape and the asked angle (90° or more or less) in the following case :**
XeF₂ and the angle F – Xe – F
 [Hint : Linear, 180°]
- Q. 3. Structure of Xenon fluoride cannot be explained by valence bond approach. Why ?**
 [Hint : Due to fully filled octet of Xe.]
- Q. 4. Why do some noble gases form compounds with fluorine and oxygen only ?**
 [Hint : Due to high electronegativity of F and oxygen.]
- Q. 5. XeF₂ has a straight linear structure and not a bent angular structure. Why ?**
 [Hint : In XeF₂, 2 bond pairs and 3 lone pairs are present hence linear structure.]
- Q. 6. Why do noble gases have very low boiling point ?**
 [Hint : Because noble gases are stabilized by weak van der Waal's forces.]
- Q. 7. Write the chemical equation involved in the preparation of XeF₄.**
 [Hint : $\text{Xe (g)} + 2\text{F}_2 \text{ (g)} \rightarrow \text{XeF}_4 \text{ (s)}$
 Ratio 1 : 5]
- Q. 8. Write IUPAC name of O₂⁺[PtF₆].**
 [Hint : Dioxygenyl hexafluoroplatinate(iv).]

SHORT ANSWER-I TYPE QUESTIONS (2 Marks)

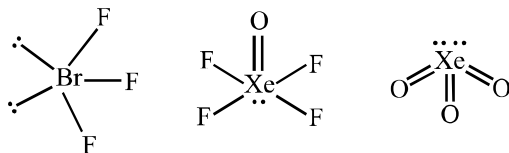
- Q. 1. Suggest reason why only known binary compounds of noble gases are fluorides and oxides of Xenon and to a lesser extent of Krypton.**
 [Hint : F and O are most electronegative elements Kr and Xe both have low ionization enthalpies as compared to He and Ne.]
- Q. 2. (i) Hydrolysis of XeF₆ is not regarded as a redox reaction. Why ?**
(ii) Write a chemical equation to represent the oxidizing nature of XeF₄.
 [Hint : (i) Because oxidation number of Xe does not change during hydrolysis of XeF₆.
 (ii) $\text{XeF}_4 + 2\text{H}_2 \rightarrow \text{Xe} + 4\text{HF}$]
- Q. 3. Write chemical equations when :**
(i) XeF₂ is hydrolysed.
(ii) PtF₆ and Xenon are mixed together.
 [Hint : (i) $2\text{XeF}_2 \text{ (s)} + 2\text{H}_2\text{O (l)} \rightarrow 2\text{Xe (g)} + 4\text{HF (aq)} + \text{O}_2 \text{ (g)}$
 (ii) $\text{Xe} + \text{PtF}_6 \rightarrow \text{Xe}^+[\text{PtF}_6]^-$]

Q. 4. Complete the reactions :



Q. 5. Draw the structure of BrF_3 , XeOF_4 , XeO_3 using VSEPR theory.

[Hint :



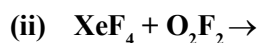
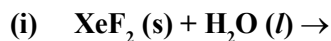
Q. 6. Account for the following :

(i) XeF_2 has linear structure and not a bent structure.

(ii) The majority of known noble gas compounds are those of Xenon. Why ?

[Hint : (ii) Xe has low ionization enthalpy as compared to other noble gases.]

Q. 7. Write the chemical reactions :



SHORT ANSWER-II TYPE QUESTIONS (3 Marks)

Q. 1. Assign reason to the following :

(i) Noble gases have large positive values of electron gain enthalpy.

(ii) Helium is used by scuba divers.

(iii) No chemical compound of helium is known.

[Hint : (i) Due to their electron configuration.

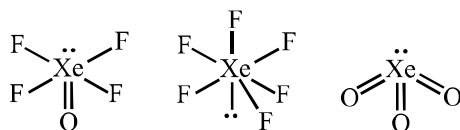
(ii) Due to its less solubility in blood.

(iii) Due to its high ionization enthalpy.]

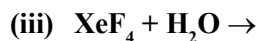
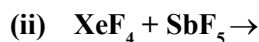
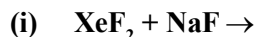
Q. 2. Draw the structure of :

(i) XeOF_4 (ii) XeF_6 (iii) XeO_3

[Hint :

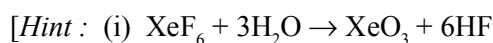


Q. 3. Complete the reactions :

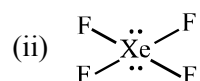
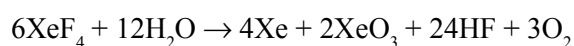


Q. 4. (i) How is XeO_3 prepared from XeF_6 ? Write the chemical equation for the reaction.

(ii) Draw the structure of XeF_4 .



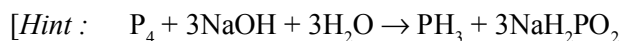
Or



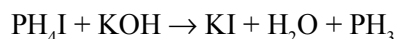
LONG ANSWER TYPE QUESTIONS (5 Marks)

Q. 1. How is PH_3 prepared in the laboratory ? How is it purified ? How does the solution of PH_3 in water react on irradiation with light and on adsorption in CuSO_4 ? How can you prove that PH_3 is basic in nature ?

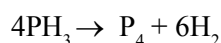
Write chemical equations for all the reactions involved.



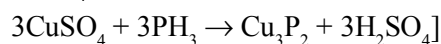
It is purified by absorbing it in HI to form PH_4I which on treating with KOH gives off phosphine.



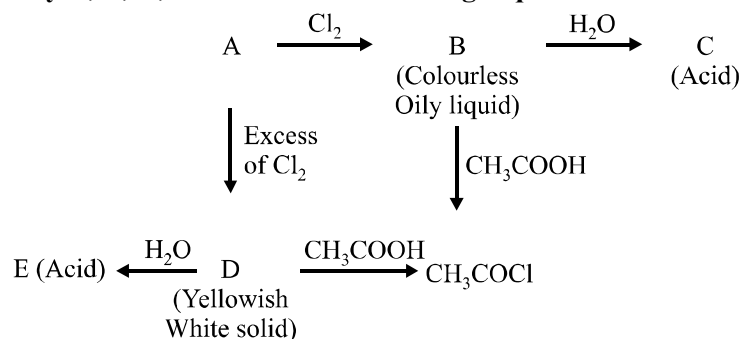
PH_3 in water decomposes into red phosphorus and hydrogen in presence of light.



Reaction with CuSO_4 :

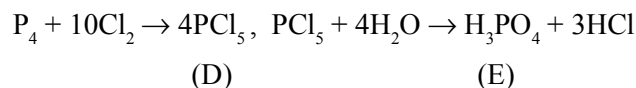
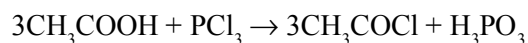
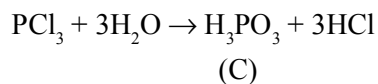


Q. 2. Identify A, B, C, D and E in the following sequence of reactions :

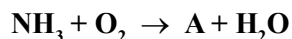


Complete the reactions of the above mentioned sequence.

[Hint : A is P_4 , B is PCl_3 .

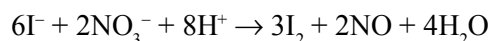
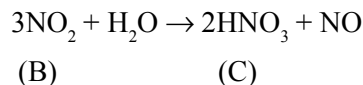
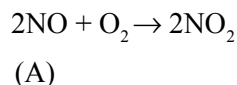


Q. 3. Write the structure of A, B, C, D and E in the following sequence of reactions :



Complete the reactions of the above mentioned sequence and name the process by which 'C' is obtained.

[Hint : A is NO and Ostwald process for the manufacture of HNO_3 .



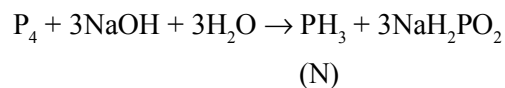
Q. 4. A waxy translucent solid, M, insoluble in water but soluble in CS_2 glows in dark. M dissolves in NaOH in an inert atmosphere giving a poisonous gas (N). Also M catches fire to give dense white fumes of Q.

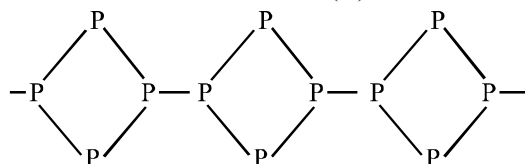
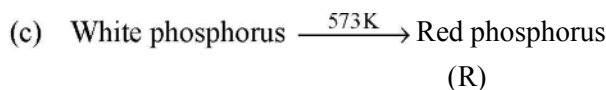
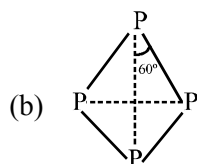
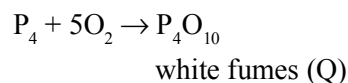
(a) Identify M, N and Q and write the chemical equations of the reactions involved.

(b) 'M' exists in the form of discrete tetrahedral molecules. Draw its structure.

(c) 'M' on heating at 573K is changed into other less reactive form, R, which is non-poisonous, insoluble in water as well as in CS_2 and does not glow in dark. Identify R and draw its structure.

[Hint : (a) M is white phosphorus.





Q. 5. Assign a possible reason for the following :

- Stability of + 5 oxidation state decreased and that of + 3 oxidation state increases down the group 15 elements.**
- H₂O is less acidic than H₂S.**
- SF₆ is inert while SF₄ is highly reactive towards hydrolysis.**
- H₃PO₂ and H₃PO₃ act as reducing agents while H₃PO₄ does not.**
- Helium gas is used by scuba divers.**

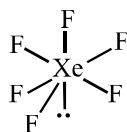
[Hint : (a) Due to inert pair effect.

- Due to more bond dissociation enthalpy of O – H as compared to S – H bond.
- Due to more steric hindrance offered by six F in SF₆ as compared to SF₄.
- Due to presence of P – H bond in them.
- He is very less soluble in blood.]

- Q. 6. (a) How is XeF₆ prepared from the XeF₄ ? Write the chemical equation for the reaction.**
- Deduce the structure of XeF₆ using VSEPR theory.**
 - How does XeF₂ reacts with PF₅ ?**
 - Give one use each of helium and neon.**
 - Write the chemical equation for the hydrolysis of XeF₄.**

[Hint : (a) $\text{XeF}_4 + \text{O}_2\text{F}_2 \rightarrow \text{XeF}_6 + \text{O}_2$

- Distorted octahedral (6BP + 1LP)



- (c) $\text{XeF}_2 + \text{PF}_5 \rightarrow [\text{XeF}]^+[\text{PF}_6]^-$
- (d) He is used in filling balloons/used by scuba divers.
Ne is used in discharge tubes, advertisement display purposes.
- (e) $6\text{XeF}_4 + 12\text{H}_2\text{O} \rightarrow 4\text{Xe} + 2\text{XeO}_3 + 24\text{HF} + 3\text{O}_2$

MATCHING TYPE QUESTIONS

Q. 1. Match the compounds given in Column I with the hybridisation and shape given in Column II and mark the correct option :

Column I	Column II
(A) XeF_6	(1) sp^3d^3 – distorted octahedral
(B) XeO_3	(2) sp^3d^2 – square planar
(C) XeOF_4	(3) sp^3 – pyramidal
(D) XeF_4	(4) sp^3d^2 – square pyramidal

Q. 2. Match the formula of oxides given in Column I with the type of oxide given in Column II and mark the correct option :

Column I	Column II
(A) Pb_3O_4	(1) Neutral oxide
(B) N_2O	(2) Acidic oxide
(C) Mn_2O_7	(3) Basic oxide
(D) Bi_2O_3	(4) Mixed oxide

Q. 3. Match the items of Columns I and II and mark the correct option :

Column I	Column II
(A) H_2SO_4	(1) Highest electron gain enthalpy
(B) CCl_3NO_2	(2) Chalcogen
(C) Cl_2	(3) Tear gas
(D) Sulphur	(4) Storage batteries

Q. 4. Match the species given in Column I with the shape given in Column II and mark the correct option :

Column I	Column II
(A) SF_4	(1) Tetrahedral
(B) BrF_3	(2) Pyramidal
(C) BrO_3^-	(3) Sea-saw shaped
(D) NH_4^+	(4) Bent T-shaped

Q. 5. Match the items of Columns I and II and mark the correct option :

Column I	Column II
(A) Its partial hydrolysis does not change oxidation state of central atom	(1) He
(B) It is used in modern diving apparatus	(2) XeF_6
(C) It is used to provide inert atmosphere for filling electrical bulbs	(3) XeF_4
(D) Its central atom is in sp^3d^2 hybridisation	(4) Ar

ANSWERS

- | | | | |
|--------------|-----------|-----------|-----------|
| 1. (A) – (1) | (B) – (3) | (C) – (4) | (D) – (2) |
| 2. (A) – (4) | (B) – (1) | (C) – (2) | (D) – (3) |
| 3. (A) – (4) | (B) – (3) | (C) – (1) | (D) – (2) |
| 4. (A) – (3) | (B) – (2) | (C) – (1) | (D) – (4) |
| 5. (A) – (2) | (B) – (3) | (C) – (2) | (D) – (4) |

VALUE BASED QUESTIONS (4 Marks)

Q. 1. Chlorofluorocarbons (CFCs) and gas emitted from the exhaust system of supersonic aeroplanes might be slowly depleting the concentration of the ozone layer in the upper atmosphere.

- Name the gas emitted from the exhaust of supersonic aeroplanes.
- Name the element of CFCs which depletes ozone.
- Write the chemical reactions involved in the ozone layer depletion.
- Mention the values that are learnt by the students in the depletion of ozone layer.

- Q. 2.** A student accidentally spills concentrated H_2SO_4 on his hand. Before the teacher gets to know, his friend washed his hands with water and also with soap but the burning sensation on hand was still going on. The friend then rubs the paste of sodium bicarbonate on his hand and then washed with water, finally the burning sensation is relieved.
- Mention the values shown by student's friend.
 - Can you recommend another substance available in the laboratory which can be used instead of sodium bicarbonate ?
 - Write the chemical reaction involved in the treatment of acid burn with sodium bicarbonate.
 - Can we use NaOH solution in place of NaHCO_3 ? If not, why ?
- Q. 3.** Ramu, a caretaker of swimming pool was using chlorine for disinfecting swimming pool water. His friend Jagat, also a swimming pool caretaker, was using ozone in place of chlorine.
- How do chlorine and ozone disinfect water ?
 - In your opinion, which is better way of disinfecting water in a swimming pool ?
 - Mention the values associated with your reply.

UNIT 8

THE *d*- AND *f*-BLOCK ELEMENTS

1. Introduction

d-block elements are present from fourth period onwards. There are mainly three series of the transition metals – 3*d* series (Sc to Zn), 4*d* series (Y to Cd) and 5*d* series (La to Hg, omitting Ce to Lu).

d-block elements are known as transition elements because their position in the periodic table is between the s-block and p-block elements. Electronic configuration of the *d*-block elements is $(n-1)d^{1-10}ns^{0-2}$ but Cu⁺, Zn, Cd, Hg etc. $[(n-1)d^{10}]$ are *d*-block elements, but not transition metals because these have completely filled *d*-orbitals.

Transition Metals of *d*-block Elements

3rd group ns^2	4th group $d^1 ns^2 d^2$	5th group $ns^2 d^3$	6th group $ns^2 d^5$	7th group $ns^2 d^5$	8th group $ns^2 d^6$	9th group $ns^2 d^7$	10th group $ns^2 d^8$	11th group $ns^2 d^{10}$	12th group $ns^2 d^{10}$
$(n-1)$	$(n-1)$	$(n-1)$	$(n-1)$	$(n-1)$	$(n-1)$	$(n-1)$	$(n-1)$	$(n-1)$	$(n-1)$
Sc	Ti	V	Cr	Mn	Fe	Co	Ni	Cu	Zn
Y	Zr	Nb	Mo	Tc	Ru	Rh	Pd	Ag	Cd
La	Hf	Ta	W	Re	Os	Ir	Pt	Au	Hg

2. General Properties of the Transition Elements

(i) Atomic and Ionic Radii

In transition metals, left to right net nuclear charge increases due to poor shielding effect. Due to this, the atomic and ionic radii for transition elements for a given series show a decreasing trend for first five elements and then becomes almost constant for next five elements of the series.

(ii) Enthalpies of Atomisation

Transition elements exhibit higher enthalpies of atomization because of large number of unpaired electrons in their atoms. They have stronger interatomic interaction and hence, stronger bond.

(iii) Ionisation Enthalpies

- In a series from left to right, ionization enthalpy increases due to increase in nuclear charge.

- The irregular trend in the first ionization enthalpy of the 3*d* metals, though of little chemical significance, can be accounted for by considering that the removal of one electron alters the relative energies of 4*s* and 3*d* orbitals.

(iv) Oxidation States

- Transition metals show variable oxidation state due to two incomplete outermost shells. Only stable oxidation states of the first row transition metals are

Sc(+ 3), Ti(+ 4), V(+ 5), Cr(+ 3, + 6), Mn(+ 2, + 7), Fe(+ 2, + 3), Co(+ 2, + 3), Ni(+ 2), Cu(+ 2), Zn(+ 2)

- The transition elements in their lower oxidation states (+ 2 and + 3) usually form ionic compounds. In higher oxidation state compounds are normally covalent.
- Only Os and Ru show + 8 oxidation states in their compounds.
- Ni and Fe in Ni(CO)₄ and Fe(CO)₅ show zero oxidation state.

(v) Trends in the Standard Electrode Potentials

- Transformation of the solid metal atoms to M²⁺ ions in solution and their standard electrode potentials.
- If sum of the first and second ionization enthalpies is greater than hydration enthalpy standard potential ($E_{M^{2+}/M}^{\circ}$) will be positive and reactivity will be lower and vice-versa.

(vi) Trends in Stability of Higher Oxidation States

The higher oxidation numbers are achieved in TiX₄, VF₅ and CrF₆. The + 7 state for Mn is not represented in simple halides but MnO₃F is known and beyond Mn no metal has a trihalide except FeX₃ and CoF₃ and increasing order of oxidizing power in the series VO₂⁺ < Cr₂O₇²⁻ < MnO⁴⁻.

(vii) Magnetic Properties

- When a magnetic field is applied to substances, mainly two types of magnetic behavior are observed : diamagnetism and paramagnetism. Paramagnetism due to presence of unpaired electrons, each such electron having a magnetic moment associated with its spin angular momentum.
- The magnetic moment is determined by the number of unpaired electrons.

$$\text{Magnetic moment} = \sqrt{n(n+2)}$$

where, *n* = number of unpaired electrons.

If all electrons are paired, substance will be diamagnetic and magnetic moment will be zero.

(viii) Formation of Coloured Ions

- The d -orbitals are non-degenerated in presence of ligands. When an electron from a lower energy d -orbital is excited to a higher energy d -orbital, the energy of required wavelength is absorbed and rest light is transmitted out. Therefore, the colour observed corresponds to the complementary colour of the light absorbed.

- In V_2O_5 , V is in + 5 oxidation state. It is coloured due to defects in crystal lattice.

(ix) Formation of Complex Compounds

- Transition metals have small size high nuclear charge which facilitates the acceptance of lone pair of electron from ligands.

- They have vacant d -orbitals of appropriate energy in order to accommodate the lone pair of electrons.

(x) Catalytic Properties

- Transition metals have two outermost shells incomplete and ability to adopt multiple oxidation states and to form complexes, therefore used as a catalyst.

- Transition metals also provide larger surface area for the reactant to be adsorbed.

(xi) Formation of Interstitial Compounds

- Small size of non-metals (H, C, N) fit into the voids of crystalline solid of transition metals and form interstitial compounds.

- The principal physical and chemical characteristics of these compounds are as follows :

- They have high melting points, higher than those of pure metals.
- They are very hard, some borides approach diamond in hardness.
- They retain metallic conductivity.
- They are chemically inert.

(xii) Alloy Formation

Alloy is the homogeneous mixture of two or more metals. Transition metals have approximate same size therefore, in molten form they can fit to each other crystalline structure and form homogeneous mixture and form the alloy.

E.g., Brass (copper-zinc) and bronze (copper-tin) etc.

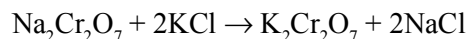
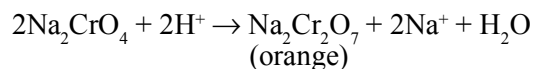
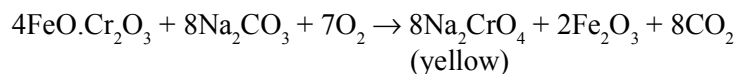
3. Some Important Compounds of Transition Elements

Potassium Dichromate ($K_2Cr_2O_7$)

(i) Ore

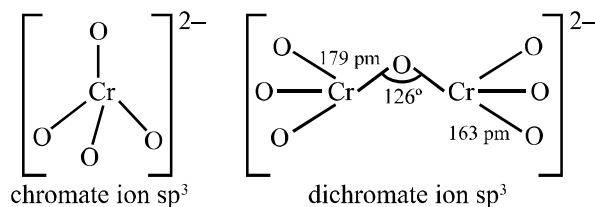
Ferrochrome or chromate ($FeO.Cr_2O_3$) or ($FeCr_2O_4$)

(ii) Preparation



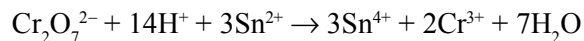
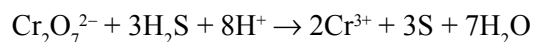
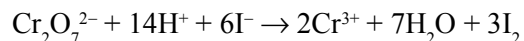
Sodium dichromate is more soluble than potassium dichromate.

- Chromates and dichromates are interconvertible in aqueous solution depending upon pH of the solutions.



(iii) Properties

Sodium and potassium dichromates are strong oxidizing agents, thus, acidified $\text{K}_2\text{Cr}_2\text{O}_7$ will oxidise iodides to iodine, sulphides to sulphur, tin (II) to tin (IV) and iron (II) salts to iron (III).



(iv) Uses

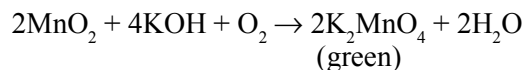
- $\text{K}_2\text{Cr}_2\text{O}_7$ is used as oxidizing agent in volumetric analysis.
- It is used in mordant dyes, leather industry, photography (for hardening of film).
- It is used in chromyl chloride test.
- It is used in cleaning glassware.

Potassium Permanganate (KMnO_4)

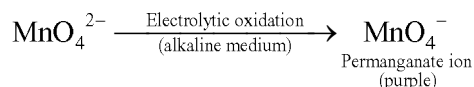
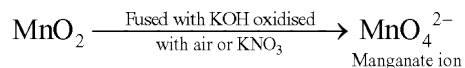
(i) Ore

Pyrolusite (MnO_2)

(ii) Preparation

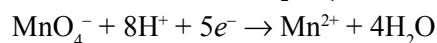


(iii) Commercial preparation

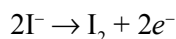
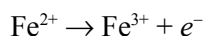
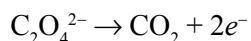
**(iv) Properties**

KMnO_4 acts as strong oxidizing agent.

(a) In presence of dilute H_2SO_4 , KMnO_4 is reduced to manganous salt.

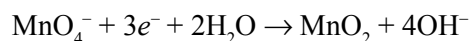


Acidic KMnO_4 solution oxidizes oxalates to CO_2 , iron (II) and iron (III), nitrites to nitrates and iodides to iodine. The half reactions of reductants are



To acidify KMnO_4 , only H_2SO_4 is used and not HCl or HNO_3 because HCl reacts with KMnO_4 and produce Cl_2 while HNO_3 , itself acts as oxidizing agent.

(b) In alkaline medium, KMnO_4 is reduced to insoluble MnO_2 .



Alkaline or neutral KMnO_4 solution oxidizes I^- to IO_3^- , $\text{S}_2\text{O}_3^{2-}$ to SO_4^{2-} , Mn^{2+} to MnO_2 etc.

(v) Uses

(a) In laboratory preparation of Cl_2 .

(b) KMnO_4 is used as an oxidizing agent, disinfectant.

(c) In making Baeyer's reagent.

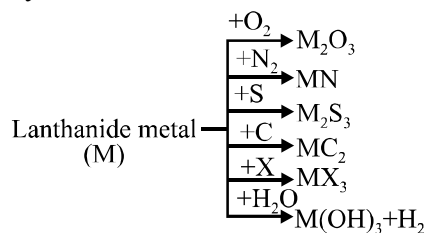
4. The Inner Transition Elements (f-Block)

The f-block consists of the two series, lanthanoids and actinoids. Lanthanoids are known as rare earth metals and actinoids are known as radioactive elements (Th to Lr).

Lanthanoids**General characteristics**

- General configuration $[\text{Xe}] 4f^{1-14}, 5d^{0-1}, 6s^2$.
- Atomic and ionic size from left to right, decreases due to increase in nuclear charge. This is known as lanthanoid contraction.
- All the lanthanoids are silvery white soft metals and tarnish rapidly in air.

- Many trivalent lanthanoid ions are coloured both in the solid state and in aqueous solutions. Neither La^{3+} nor Lu^{3+} ion shows any colour but the rest do so.
- The lanthanoid ions other than the f^0 type (La^{3+} and Ce^{4+}) and the f^{14} type (Yb^{2+} and Lu^{3+}) are all paramagnetic. The paramagnetism arises to maximum in neodymium.
- Oxidation states $\rightarrow \text{Ce}^{4+}$; (Some elements) is favoured by its noble gas configuration, but it is a strong oxidant reverting to the common + 3 state. The E°_{value} for $\text{Ce}^{4+}/\text{Ce}^{3+}$ is + 1.74 V, the reaction rate is very slow and hence, Ce(IV) is a good analytical reagent. Pr, Nd, Tb and Dy also exhibit + 4 state but only in oxides. Eu^{2+} is formed by losing the two s-electrons and its f^7 configuration accounts for the formation of this ion. However, Eu^{2+} is a strong reducing agent changing to the common + 3 state. Similarly, Yb^{2+} which has f^{14} configuration is a reductant, Tb^{4+} has half-filled *f*-orbitals and is an oxidant.
- Lanthanoid are very reactive metals like alkaline earth metals.



- Misch metals, contain lanthanoids about 90-95% (Ce 40-5%, Lanthanum and neodymium 44%) iron 4.5%, calcium, carbon and silicon about 10.5% are used in cigarette and gas lighters, toys, tank and tracer bullets.

Actinoids

- Genral configuration $[\text{Rn}] 5f^{1-14}, 6d^{0-2}, 7s^2$.
- Actinoids exhibit a range of oxidation states due to comparable energies of $5f$, $6d$ and $7s$ orbitals. The genral oxidation state of actinoids is + 3.
- All the actinoids are strong reducing agents and very reactive.
- Actinoids also react with oxygen, halogen, hydrogen and sulphur, etc. like lanthanoids.
- Actinoids are radioactive in nature and therefore, it is difficult to study their chemical nature.

VERY SHORT ANSWER TYPE QUESTIONS (1 Mark)

Q. 1. Explain $\text{CuSO}_4 \cdot 5\text{H}_2\text{O}$ is blue while CuSO_4 is colourless ?

Ans. Because water molecules act as ligands and results in crystal field splitting of *d*-orbitals of Cu^{2+} ion.

Q. 2. Which element among $3d$ series exhibit highest oxidation state ?

Ans. Mn

Q. 3. In 3d series (Sc to Zn), the enthalpy of atomization of Zn is low. Why ?

Ans. Due to absence of unpaired electrons.

Q. 4. Which element among 3d series exhibit only one oxidation state ?

Ans. Sc

Q. 5. Why is the 3rd ionization energy of Mn ($Z = 25$) is unexpectedly high ?

Ans. Due to half-filled electronic configuration.

Q. 6. Define alloy.

Ans. Alloys are homogeneous solid solutions of two or more metals.

Q. 7. Transition metals show zero oxidation state with ligands like CO. Explain.

Ans. Co form synergic bonding with metal ion.

Q. 8. Why can't HCl acid be used to acidify KMnO_4 solution ?

Ans. Because KMnO_4 oxidize HCl into Cl_2 .

Q. 9. Name one ore of Mn and Cr.

Ans. Mn : MnO_2

Cr : FeCr_2O_4

Q. 10. Why Mn^{2+} compounds are more stable than Fe^{2+} compounds towards oxidation to their + 3 state ?

Ans. Mn^{+2} has half-filled electronic configuration.

Q. 11. Why do transition metal (elements) show variable oxidation states ?

Ans. Due to presence of vacant *d*-orbitals.

Q. 12. Write any uses of pyrophoric alloy.

Ans. Making bullets, shells and lighter flints.

Q. 13. Which is more basic – $\text{La}(\text{OH})_3$ or $\text{Lu}(\text{OH})_3$? Why ?

Ans. $\text{La}(\text{OH})_3$, due to lanthanide contraction, lower size, more covalent character, least basic.

Q. 14. Find out number of Cr – O – Cr bond/bonds in $\text{Cr}_2\text{O}_7^{2-}$ ion.

Ans. 1

Q. 15. What is effect of increasing pH on $\text{K}_2\text{Cr}_2\text{O}_7$ solution ?

Ans. It changes into K_2CrO_4 solution/orange colour change into yellow colour.

Q. 16. Why is Ce^{4+} in aqueous solution a good oxidizing agent ?

Ans. Because Ce^{4+} is most stable in Ce^{+3} state in aqueous solution.

Q. 17. Why do Zr and Hf exhibit similar properties ?

Ans. Due to lanthanide contraction.

Q. 18. What is lanthanoid contraction ?

Ans. The regular slow decrease in the atomic or ionic radii of lanthanoids with increasing atomic number.

Q. 19. Why is Cu ($Z = 29$) considered a transition metal ?

Ans. Due to its partially filled *d*-orbital in Cu^{2+} state.

Q. 20. Arrange the given in increasing order of acidic character :

$\text{CrO}_3, \text{CrO}, \text{Cr}_2\text{O}_3$.

Ans. $\text{CrO} < \text{Cr}_2\text{O}_3 < \text{CrO}_3$

Q. 21. Why KMnO_4 or MnO_4^- ion is coloured ?

Ans. Due to charge transfer complex formation.

SHORT ANSWER-I TYPE QUESTIONS (2 Marks)

Q. 1. Chromium is typical hard metal while mercury is a liquid. Explain why ?

Ans. Cr has five unpaired *d*-electrons. Hence metallic bonds are strong. In Hg, there is absence of unpaired electrons and size is larger.

Q. 2. Why KMnO_4 is used in cleaning surgical instruments in hospitals ?

Ans. This is because KMnO_4 has a germicidal action.

Q. 3. Most of the transition metals do not displace hydrogen from dilute acids, why ?

Ans. Due to their –ve reduction potential.

Q. 4. Explain why Cu^+ is not stable in aqueous solution ?

Ans. Due to less –ve $\Delta_{\text{hyd}}H^\circ$ of Cu^+ /it cannot compensate 2nd ionization potential of Cu.

Q. 5. Why is the highest oxidation state of a metal exhibited in its oxide or fluoride only ?

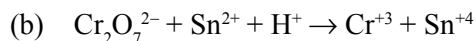
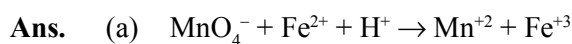
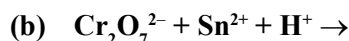
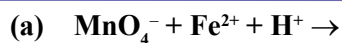
Ans. Oxygen and fluoride have small size and high electronegativity. They can oxidise the metal.

Q. 6. Write electronic configuration of Cu^{+2} and Co^{+2} .

Ans. $\text{Cu}^{+2} = [\text{Ar}] 3d^9 4s^0$

$\text{Co}^{+2} = [\text{Ar}] 3d^7$

Q. 7. Balance the following equations :



Q. 8. Briefly explain why electronic configuration of lanthanoids are not known with certainty ?

Ans. $4f/5d$ subshells are very close in energy. +ve electrons can jump from $4f$ to $5d$ or vice-versa.

Q. 9. Why Zn, Cd, Hg are soft and have low melting point ?

Ans. Due to weak interatomic attraction/absence of unpaired electrons.

Q. 10. What is the effect of pH on the solution of $\text{K}_2\text{Cr}_2\text{O}_4$ solution ?

Ans. $\text{K}_2\text{Cr}_2\text{O}_4$ solution changes into $\text{K}_2\text{Cr}_2\text{O}_7$ /yellow colour changes into orange colour.

Q. 11. Which of the following is/are transition element and why ?

Zn, Cd, Ag, Fe, Ni

Ans. Fe, Ni, Ag

Q. 12. What are interstitial compounds ? Give example.

Ans. When small atoms like C, H, B and N occupy interstitial site in their lattice.
Example, TiC, Fe_3H ,

Q. 13. Why are Zn, Cd, Hg volatile metals ? Explain.

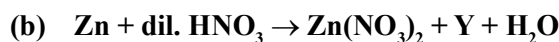
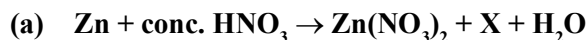
Ans. Due to weak interatomic attraction/low boiling point.

Q. 14. Why is first ionization energy of $5d$ elements higher than those of $3d$ and $4d$ elements ?

Q. 15. Explain 'Misch metal' and write its use.

Ans. It is an alloy of 95% lanthanoid and 5% iron and traces of S, C, Ca and Al. Used in lighter flint, bullet tips etc.

Q. 16. The following two reactions of HNO_3 with Zn are given :

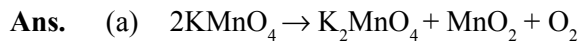
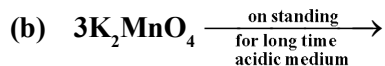


Identify X and Y.

Ans. $\text{X} = \text{NO}_2$

$\text{Y} = \text{N}_2\text{O}$

Q. 17. Complete the equations :

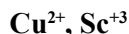


Q. 18. Out of Fe and Cu, which one would exhibit higher melting point ?

Ans. Fe, due to large number of unpaired *d*-electrons/more interatomic attraction.

Q. 19. Sc, the first member of first transition series does not exhibit variable oxidation state. Why ?

Ans. Due to noble gas electronic configuration in + 3 oxidation state no other oxidation state is stable.

SHORT ANSWER-II TYPE QUESTIONS (3 Marks)Q. 1. (a) Deduce the number of 3*d* electrons in the following ions :

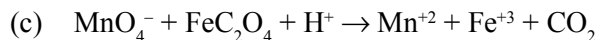
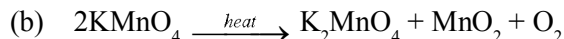
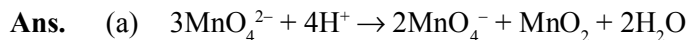
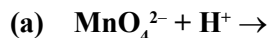
(b) Why do transition metals form alloy ?

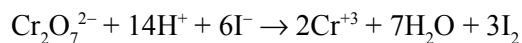
(c) Why Zn^{+2} salts are white ?Ans. (a) Cu^{+2} : 9 electrons Sc^{+3} : 0 electron

(b) Transition metals have similar atomic radii.

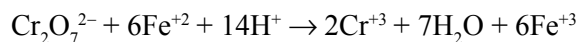
(c) Absence of unpaired electron.

Q. 2. Complete and balance the following equations :

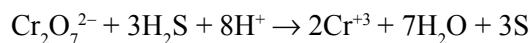
Q. 3. Describe the oxidizing action of $\text{K}_2\text{Cr}_2\text{O}_7$ with the following. Write ionic equations for its reaction (acidic medium) with :(a) I^- (b) Iron(II) (c) H_2S Ans. (a) It liberates I_2 from I^- .



(b) It oxidizes Fe^{+2} to Fe^{+3} .



(b) It oxidizes H_2S to sulphur.



Q. 4. Write any four differences between lanthanoids and actinoids.

Ans.	Lanthanoids	Actinoids
(a)	They are generally non-radioactive.	They are radioactive.
(b)	Most of their ions are colourless.	Coloured ions.
(c)	Show + 3, + 4 and + 2 oxidation state.	Beside + 3, show higher oxidation state.
(d)	Less tendency of complex formation.	Higher tendency.

Q. 5. (a) Why is separation of lanthanoid elements difficult ?

(b) Transition metal exhibit higher enthalpies of atomization. Explain why ?

(c) Why have the transition metal high enthalpy of hydration ?

Ans.	(a) Due to lanthanide contraction, the size of these elements is nearly same.
	(b) Transition metal contain large number of unpaired electrons, and they have strong interatomic attractions.
	(c) Due to their small size and large nuclear charge.

Q. 6. (a) Use Hund's rule to derive the electronic configuration of Ce^{+3} ions and calculate its magnitude moment.

(b) Is lanthanum a *f*-block element ?

Ans.	(a) ${}_{58}\text{Ce} = [\text{Xe}] 4f^1 5d^1 6s^2$ $\text{Ce}^{+3} = 4f^1$ one unpaired electron
-------------	--

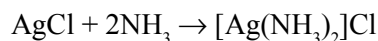
$$\mu = \sqrt{n(n+2)} = 1.73 \text{ BH}$$

(b) No, it is a *d*-block element.

Q. 7. Account for the following :

- (a) Silver chloride dissolves in excess of NH_3 .
- (b) Cuprous chloride is diamagnetic while cupric chloride is paramagnetic.
- (c) In CrO_4^{2-} ion, all the Cr – O bond length are equal.

Ans.	(a) AgCl forms a soluble complex with NH_3 .
-------------	--



- (b) $\text{Cu}^+ : 3d^{10} 4s^0$ – All electrons are paired.
 $\text{Cu}^{2+} : 3d^9$ – Here, one unpaired electron is present.
- (c) Due to resonance.

Q. 8. The E° values in respect of electrodes of Cr, Mn and iron are :

$$\text{Cr}^{3+}/\text{Cr}^{2+} = -0.4 \text{ V}$$

$$\text{Mn}^{3+}/\text{Mn}^{2+} = +1.5 \text{ V}$$

$$\text{Fe}^{3+}/\text{Fe}^{2+} = +0.8 \text{ V}$$

Compare the feasibilities of further oxidation of these ions.

Ans. Cr^{3+} is more stable than Cr^{2+} .

Mn^{2+} is more stable than Mn^{3+} .

Fe^{3+} is more stable than Fe^{2+} .

Order of feasibility of + 2 oxidation state is :



Q. 9. Write any three properties of interstitial compounds.

- Ans.** (a) They are chemically inert.
 (b) They retain metallic conductivity.
 (c) They have high melting point than their pure metals.
 (d) These are harder and more corrosion resistant.

Q. 10. Account for the following :

- (a) All Scandium salts are white.
 (b) The 1st ionization energy of the 5*d* series are higher than 3*d* and 4*d* transition elements in respective groups.
 (c) Ce^{+3} can be easily oxidized to Ce^{+4} .

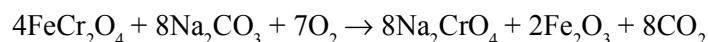
Ans. (a) Sc has only + 3 oxidation state, there is no unpaired electron.

(b) Due to lanthanide contraction, effective nuclear charge increase.

(c) Due to gain noble gas electron configuration.

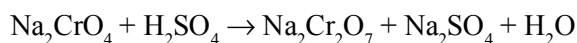
Q. 11. A green chromium compound (A) on fusion with alkali gives a yellow compound (B) which on acidification gives a orange coloured compound (C). Identify A, B, C. Write equations for reactions.

Ans. A : FeCr_2O_4 B : Na_2CrO_4 C. $\text{Na}_2\text{Cr}_2\text{O}_7$



(A)

(B)



(C)

Q. 12. When an oxide of Mn (A) is fused with KOH in the presence of an oxidizing agent and dissolved in water, it gives a dark solution of compound (B). Compound (B) disproportionate in neutral or acidic solution to give purple compound (C). Identify A, B, C.

Ans. A : MnO_2 B : K_2MnO_4 C : KMnO_4

LONG ANSWER TYPE QUESTIONS (5 Marks)

Q. 1. A violet compound of manganese (A) decomposes on heating to liberate oxygen and compounds (B) and (C) of manganese are formed. Compound (C) reacts with KOH in the presence of KNO_3 to give compound (B). On heating compound (C) with conc. H_2SO_4 and NaCl, Cl_2 gas is liberated and compound (D) of manganese is formed. Identify A, B, C, D alongwith reactions involved.

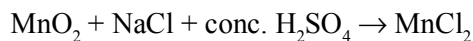
Ans. A : KMnO_4 B : K_2MnO_4 C : MnO_2 D : MnCl_2



(A) (B)



(C) (B)



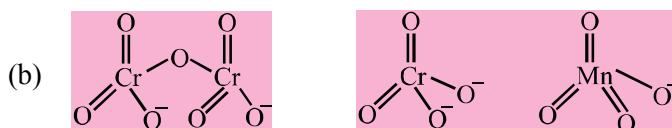
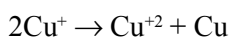
(C) (D)

Q. 2. (a) What is meant by disproportionation of an oxidation state ? Give one example.

(b) Draw the structures of $\text{Cr}_2\text{O}_7^{2-}$, CrO_4^{2-} , MnO_4^- .

(c) What is the effect of lanthanoids contraction beyond lanthanoid ?

Ans. (a) When any atom or ion undergo oxidation and reduction simultaneously it is called disproportionation.



(c) Size of respective 4d and 5d series elements becomes comparable from fourth group onwards (e.g., Zr and Hf).

VALUE BASED QUESTIONS (4 Marks)

- Q. 1.** A group of students was smoking cigarettes in college premises. A social activist noticed and advised them not to smoke.
- By forbidding them not to smoke, which value of social activity wants to be inculcated among the youth ?
 - As a chemistry student, write the name of 'alloy' used in lighter's flint.
 - Mention diseases caused by smoking.
 - Name the chemical present in the smoke which is habit forming.
- Q. 2.** It is a general myth that we should not come out of the house to see solar eclipse because it can have evil impact on life but nowadays educated people allow their children to see solar eclipse, treating them as a natural science phenomenon, but children are advised to see them by uv protected sun glasses (crooke's lenses) to avoid harmful impact of uv light on eyes.
- Write the name of *d*-block metal oxide used in making uv protected lens.
 - By allowing the children to see solar eclipse using uv protected lens, which value the educated people are trying to inculcate in the children ?
 - Which rays are present in the light which can damage the eye while viewing solar eclipse with naked eye ?
 - Name the oxide of a lanthanoid also present in uv protected lenses.
- Q. 3.** In Chemistry lab, Lalit used $\text{Na}_2\text{Cr}_2\text{O}_7$ for the estimation of Fe^{2+} and I^- in redox reactions while Sahil uses $\text{K}_2\text{Cr}_2\text{O}_7$ for the same estimation of ions.
- Out of these two, who is performing correct estimation of ions ?
 - Draw the structure of $\text{Cr}_2\text{O}_7^{2-}$ ion.
 - Explain why CrO_4^{2-} and $\text{Cr}_2\text{O}_7^{2-}$ are interconvertible by the change in pH of the medium.
 - Name the value learnt by the use of $\text{K}_2\text{Cr}_2\text{O}_7$ in the estimation of ions.
- Q. 4.** For automotive catalytic converters, transition metals like Pt, Pd, Rh, Fe, Cr etc. used in industry are expensive while ceramic cores are inexpensive.
- Which property of transition metal makes them useful as catalyst ?
 - What is the function of catalytic convertor ?
 - As a student of chemistry, would you suggest the use of explosive metals like Pt, Pd and Rh ? Give reasons.
 - Which value is promoted through the use of catalytic convertors in industry ?

- Q. 5.** Due to scarcity to water, the resident of a colony decided to refuse their well which was not used for the past six months. The secretary of RWA decided to clean the well by adding small amount of potassium permanganate in the well and then loaded the well water with alum crystals.
- Why did the secretary of RWA add potassium permanganate in well ?
 - Draw the structure of permanganate ion, MnO_4^- .
 - Why did secretary of RWA add alum to the well ?
 - What values are associated with the use of KMnO_4 and alum ?

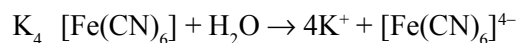
UNIT 9

COORDINATION COMPOUNDS

1. Introduction

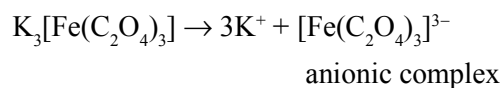
Complex compounds or coordination compounds are those molecular compounds which retain their identity in solid as well as in solution are known as complex compounds. In these compounds metal atoms are bound to a number of anions.

Example,

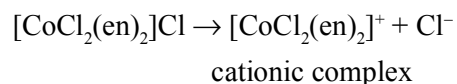


2. Types of Complex

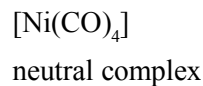
(i) Anionic complex



(ii) Cationic complex



(iii) Neutral complex



3. Ligands

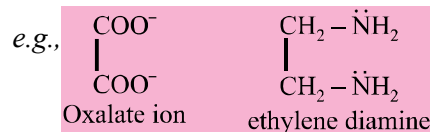
The ions or molecules bound to the central atom/ion in the coordination entity are called ligands.

Types of Ligands

(i) Unidentate, a ligand which is bound to a metal ion through a single donor atom.

e.g., H_2O , NH_3 , CO , Cl^- , NH_2^- etc.

(ii) Didentate, a ligand which is bound to a metal ion through a two donor atoms.



(iii) Polydentate, a ligand which is bound to a metal ion through a several donor atoms.

e.g., ethylene diamine tetraacetate ion [EDTA]⁴⁻.

(iv) Ambidentate ligands, which can ligate through two different atoms.

e.g., – NO₂ – ONO, – SCN – NCS etc.

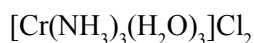
(v) Chelate ligands, these may be a di- or polydentate ligand which form closed ring with central metal ion. Closed ring is known as chelate ring. Number of more chelate ring in complex, complex will be more stable. The number of such ligating groups is called the denticity.

4. Homoleptic and Heteroleptic Complexes

Complexes in which a metal is bound to only one kind of donor groups *e.g.*, Co(NH₃)₆]³⁺ are known as homoleptic. Complexes in which a metal is bound to more than one kind of donor groups *e.g.*, [Co(NH₃)₄Cl₂]⁺, are known as heteroleptic.

5. Nomenclature of Coordination Compounds

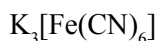
Cationic Complex



triamminetriaquachromium (III) chloride

- (i) Prefixes mono, di, tri, etc. are used to indicate the number of the individual ligands and ligands are named in an alphabetical order.
- (ii) Central metal atom and oxidation state indicated by Roman numeral in parenthesis.
- (iii) Name of ionisable anion.

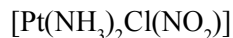
Anionic Complex



Potassium hexacyanoferrate (III)

- (i) Name of ionisable metal and oxidation state
- (ii) Name of ligand in an alphabetical order
- (iii) Central metal atom + ate and oxidation state

Neutral Complex



Diammine chloronitrito-N-platinum (II)

- (i) Name of ligands in an alphabetical order
- (ii) Central metal atom and oxidation state

6. Isomerism in Coordination Compounds

Stereo isomerism and structural isomerism are the two principal types of isomerisms which are known among coordination compounds.

Stereo Isomerism

It occurs due to different arrangements of ligands around central metal atom. It is of two types : geometrical isomerism and optical isomerism.

Geometrical Isomerism

It arises in heteroleptic complexes due to different possible geometric arrangements of the ligands. Important examples of this behavior are found in square planar and octahedral complexes.

- (i) **Square planar complex of formula $[MX_2L_2]$ (X and L are unidentate)**, the two ligands X may be arranged adjacent to each other in a *cis* isomer, or opposite to each other in a *trans* isomer.

e.g., $[\text{Pt}(\text{NH}_3)_2\text{Cl}_2]$

- (ii) **Square planar complex of the type $[MABXL]$ (where A, B, X, L are unidentates)** shows three isomers – **two *cis* and one *trans***. Such isomerism is not possible for tetrahedral geometry.

e.g., $[\text{Pt}(\text{NH}_3)(\text{Br})(\text{Cl})(\text{Py})]$

- (iii) **Octahedral complexes of formula $[MX_2L_4]$** in which the two ligands X may be oriented *cis* or *trans* to each other.

e.g., $[\text{Co}(\text{NH}_3)_4\text{Cl}_2]^+$

- (iv) **Octahedral complexes of formula $[MX_2A_2]$** where X are unidentates and A are didentate and form *cis* and *trans* isomers.

e.g., $[\text{CoCl}_2(\text{en})_2]$

- (v) **Octahedral coordination entities of the type $[Ma_3b_3]$** like $[\text{Co}(\text{NH}_3)_3(\text{NO}_2)_3]$. If three donor atoms of the same ligands occupy adjacent positions at the corners of an octahedral face, we have the facial (*fac*) isomer. When the positions are around the meridian of the octahedron, we get the meridional (*mer*) isomer.

Optical Isomerism

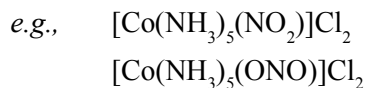
- It arises when mirror images cannot be superimposed on one another. These mirror images are called as enantiomers. The two forms are called *dextro* (*d*) and *laevo* (*l*).
- Optical isomerism is common in octahedral complexes but at least one didentate ligand should be present.

e.g., $[\text{Co}(\text{en})_3]^{3+}$, $[\text{PtCl}_2(\text{en})_2]^{2+}$ etc.

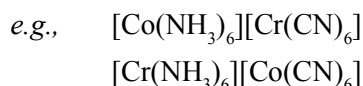
Structural Isomerism

In structural isomerism, isomers have different bonding pattern. Different types of structural isomerism is as follows :

(i) **Linkage isomerism**, arises in a coordination compound containing ambidentate ligand.



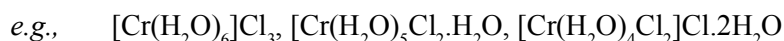
(ii) **Coordination isomerism**, arises from the interchange of ligands between cationic and anionic entities of different metal ions present in a complex.



(iii) **Ionisation isomerism**, when the ionisable anion exchange with anion ligand.



(iv) **Solvate isomerism**, is also known as 'hydrate isomerism'. In this case water is involved as a solvent.



7. Bonding in Coordination Compounds

Werner's Theory

(i) In complex compounds, metal atom exhibit two types of valencies – primary valency and secondary valency.

(ii) Primary valencies are satisfied by anions only while secondary valencies are satisfied by ligands. Primary valency depends upon oxidation number of central metal atom while secondary valency represents coordination number of central metal atom.

(iii) Primary valencies are ionisable and are non-directional while secondary valencies are non-ionisable and directional. Therefore, geometry of complex is decided by secondary valencies.

Valence Bond Theory

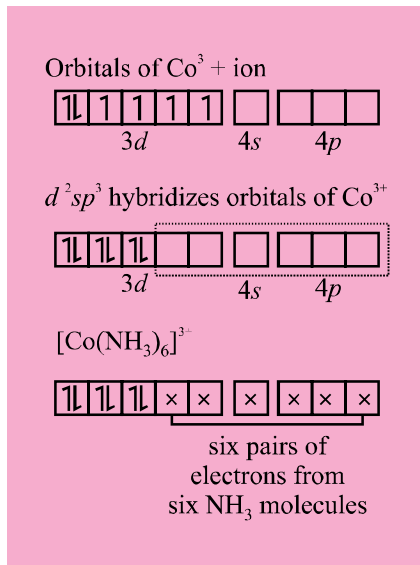
According to this theory, the metal atom or ion under the influence of ligands form inner orbital and outer orbital complex. These hybridized orbitals are allowed to overlap with ligand orbitals that can donate electron pairs for bonding.

(i) **Six ligands (unidentate) (octahedral entity)** Generally central atom belongs 3d series and ligands can be monodentate or didentate but coordination number should be six and shape of complexes will be octahedral and form two types of complexes.

(a) **Inner orbital complexes**, which are formed due to participation of (n-1)d orbitals in hybridisation is (d^2sp^3) and shape of complex will be octahedral.

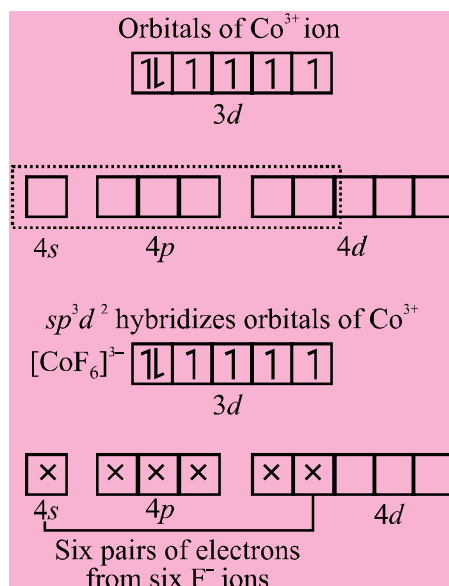
(b) **Outer orbital complexes**, which are formed due to participation of nd orbitals in hybridisation is (sp^3d^2). Generally halides (F^- , Cl^- , Br^- , I^-), SCN^- , S^{2-} form outer orbital complexes and other ligands form inner orbital complexes.





All electrons are paired therefore, complex will be diamagnetic in nature.

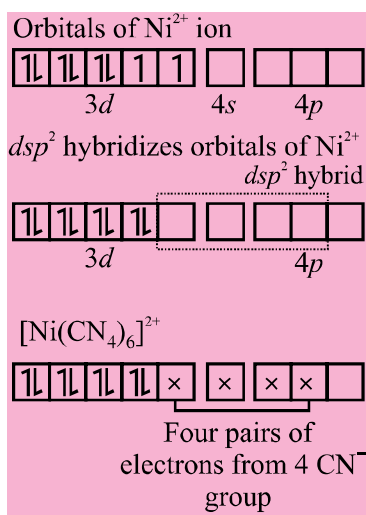
e.g., **Outer orbital complex**, $[\text{CoF}_6]^{3-}$



Complex has unpaired electrons, therefore, complex will be paramagnetic in nature.

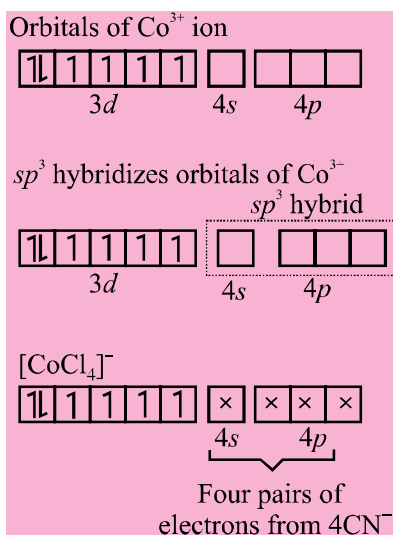
- Generally halides (F^- , Cl^- , Br^- , I^-) ligands, $[\text{Ni}(\text{CO})_4]$, $[\text{Co}(\text{CO})_4]$, $[\text{Zn}(\text{NH}_3)_4]^{2+}$ complexes form outer orbital complexes and other form inner orbital complexes. For example,

1. Inner orbital complex, $[\text{Ni}(\text{CN})_4]^{2-}$



All electrons are paired. Complex will be diamagnetic in nature.

2. Outer orbital complex, $[\text{CoCl}_4]^-$

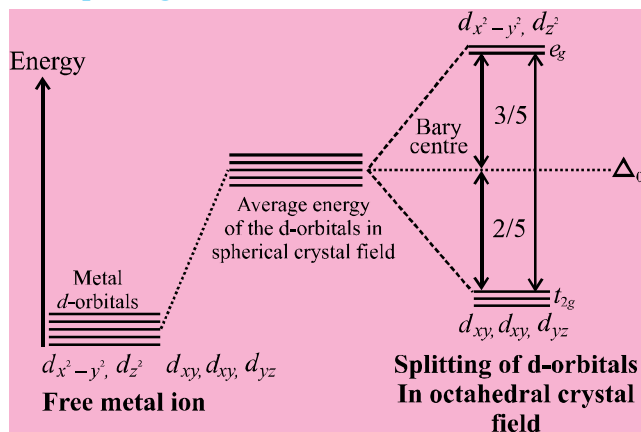


Complex has unpaired electrons. Complex will be paramagnetic in nature.

Crystal Field Theory

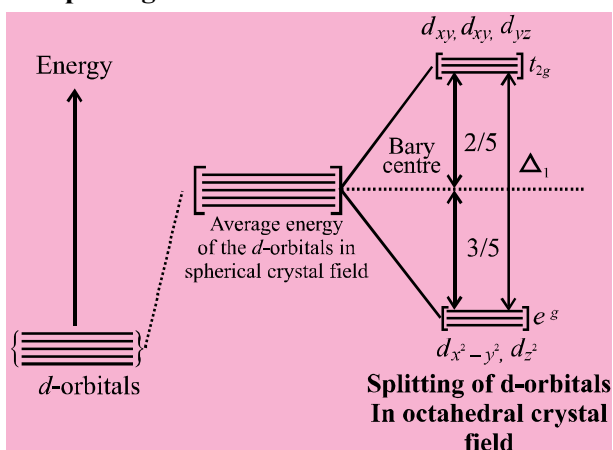
The five d -orbitals are split into lower and higher energy level due to approach of ligands is known as crystal field theory. The five d -orbitals in a gaseous metal atom/ion have same energy.

(i) Crystal field splitting in octahedral coordination entities.



- Energy separation is denoted by Δ_o (the subscript o is for octahedral).
- The energy of the two e_g orbitals (higher energy orbitals) will increase by $(3/5)\Delta_o$ and that of the three t_{2g} (lower energy orbitals) will decrease by $(2/5)\Delta_o$.
- If $\Delta_o < p$, the fourth electron enters one of the e_g orbitals giving the configuration $t_{2g}^3 e_g^1$. Ligands for which $\Delta_o < p$ are known as weak field ligands and form high spin complexes.
- If $\Delta_o > p$, it becomes more energetically favourable for the fourth electron to occupy a t_{2g} orbital with configuration $t_{2g}^4 e_g^0$. Ligands which produce this effect are known as strong field ligands and form low spin complexes, where p represents the energy required for electron pairing in a single orbital.

(ii) Crystal field splitting in tetrahedral coordination entities.



- In tetrahedral coordination entities, $\Delta_t = (4/9)\Delta_o$. Consequently the orbital splitting energies are not sufficiently large for forcing pairing and, therefore, low spin configurations are rarely observed.

• Due to less crystal field stabilization energy, it is not possible to pair electrons and so all the tetrahedral complexes are high spin.

8. Colour in Coordination Compounds

• In complex compounds d -orbitals split in two sets t_{2g} and e_g . These have different energies. The difference in energies lies in visible region and electron jump from ground state t_{2g} level to higher state e_g level. This is known as $d-d$ transition and it is responsible for colour of coordination compounds.

• $d-d$ transition takes place in d^1 to d^9 ions, so the ions having d^1 to d^9 configuration are coloured. On the other hand, the ions d^0 and d^{10} configuration do not show $d-d$ transition.

9. Importance and Applications of Coordination Compounds

• Hardness of water is estimated by simple titration with Na_2EDTA . The Ca^{2+} and Mg^{2+} ions form stable complexes with EDTA.

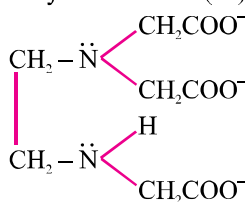
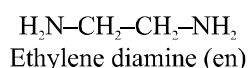
• Some important extraction processes of metals, like those of silver and gold make use of complex formation.

• Similarly, purification of metals can be achieved through formation and subsequent decomposition of their coordination compounds. For example, impure nickel is converted to $[\text{Ni}(\text{CO})_4]$, which is decomposed to yield pure nickel.

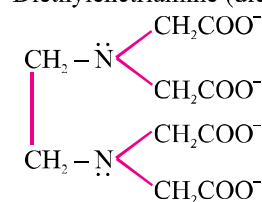
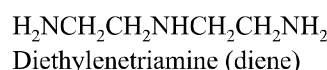
• Coordination compounds are used as catalysts for many industrial processes. Examples include rhodium complex, $[(\text{PH}_3)_3\text{RhCl}]$, a Wilkinson catalyst, is used for the hydrogenation of alkenes.

Supplementary List of Ligands

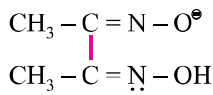
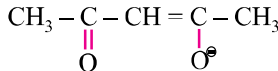
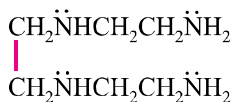
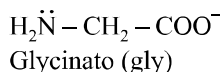
Ligand	F^-	Cl^-	Br^-	I^-	OH^-	CN^-	O^{2-}	O_2^{2-}	O_2^-	CO_3^{2-}	PH_3
Name	fluoro	chloro	bromo	iodo	hydroxo	cyano	oxo	peroxo	super-oxo	car-bon-ato	phos-phine
Ligand	SO_4^{2-}	NO_2^-	ONO^-	SCN^-	NCS	CH_3COO^-	$\text{C}_5\text{H}_5\text{N}$	S^{2-}	$\text{S}_2\text{O}_3^{2-}$	NO_3^-	SO_3^{2-}
Name	sulphato	nitro	nitrito	thiocyanato	isothiocyanato	acetate	pyridine (Py)	sulphido	thiosulphato	nitrate	sulphito
Ligand	NC^-	$(\text{C}_6\text{H}_5)_3\text{P}$	CS	NH_2^-	NH^{2-}	H_2NCSNH_2	$\text{C}_2\text{O}_4^{2-}$	H_2O	NH_3	CO	NO
Name	isocyanato	triphenyl phosphine	thiocarbonyl	amido	imido	thiourea (tu)	oxalate (ox)	aqua	ammine	carbonyl	nitrosyl



Ethylene diamine triacetate ion EDTA^{4-}



Ethylene diamine triacetate ion EDTA^{3-}



VERY SHORT ANSWER TYPE QUESTIONS (1 Mark)

Q. 1. Write the oxidation state of Nickel in $[\text{Ni}(\text{CO})_4]$.

Ans. Zero

Q. 2. What is ambidentate ligand? Give one example.

Ans. Monodentate ligands contain more than one coordinating atoms. Example, CN^- .

Q. 3. Write the IUPAC name of $[\text{PtCl}_2(\text{en})_2(\text{NO}_3)_2]$.

Ans. Dichloridobis(ethylenediammine)nitratoplatinum(IV)

Q. 4. Write the name of a complex compound used in chemotherapy.

Ans. Cis-platin.

Q. 5. What is a chelate ligand? Give one example.

Ans. The ligand which contain from two or more donar sites simutaneously to form cyclic complaces. Example, ethane-1-2 diammine.

Q. 6. Name one homogeneous catalyst used in hydrogenation of alkenes.

Ans. Wilkinson's catalyst.

Q. 7. How many geometrical isomers are possible for the $[\text{Ni}(\text{NH}_3)_4]^{+2}$?

Ans. Not possible because all 4 ligands are same.

Q. 8. Write IUPAC name of $[\text{Co}(\text{C}_2\text{O}_4)_3]^{-3}$.

Ans. Trioxalatocobalate(III) ion.

Q. 9. Give an example of coordination isomerism.

Ans. $[\text{Co}(\text{NH}_3)_6][\text{Cr}(\text{CN})_6]$

Q. 10. Name an ionization isomer of $[\text{Cr}(\text{H}_2\text{O})_5\text{Br}]\text{SO}_4$.

Ans. Pentaquasulphatochromium (III) bromide.

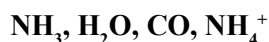
Q. 11. Define coordination polyhedron.

Ans. The spatial arrangement of the ligand with the central metal ion.

Q. 12. Give the chemical formula of potassium hexacyano ferrate (II).

Ans. $\text{K}_4[\text{Fe}(\text{CN})_6]$

Q. 13. Which of these cannot act as a ligand?



Ans. NH_4^+ does not have lone pair of electron.

Q. 14. Give one use of Ziegler Natta catalyst.

Ans. Heterogeneous catalysis or in high density polymerisation.

Q. 15. Name the metal present in :

- (i) Chlorophyll (ii) Haemoglobin (iii) Vit. B-12
(iv) cis platin

Ans. (i) Mg (ii) Fe (iii) Co (iv) Pt

Q. 16. The chemical formula of Wilkinson's catalyst is :

Ans. $(C_6H_5)_3P.RhCl$

Q. 17. Which of the two is more stable – $K_4[Fe(CN)_6]$ Or $K_3[Fe(CN)_6]$?

Ans. $K_4[Fe(CN)_6]$ because Fe has d^6 configuration in this case.

Q. 18. How many moles of AgCl will be precipitated when an excess of $AgNO_3$ is added to a molar solution of $[CrCl(H_2O)_5]Cl_2$?

Ans. 2 moles because 2 Cl^- ions are present as counter ion in the complex.

Q. 19. Which type of ligands form chelates ?

Ans. Polydentate ligand.

Q. 20. Arrange the following complexes in order of increasing electrical conductivity :



Ans. $[Co(NH_3)_3Cl_3] < [Co(NH_3)_4]Cl_3 < [Co(NH_3)_5Cl]Cl_2$

More number of ions < more electrical conductivity

SHORT ANSWER-I TYPE QUESTIONS (2 Marks)

Q. 1. Calculate the magnetic moments of the following complexes :

- (i) $[Fe(CN)_6]^{4-}$ (ii) $[FeF_6]^{3-}$

Ans. (i) $Fe^{+2} \rightarrow 3d^6$. CN^- is a strong ligand so e^- pair $4p$, no unpaired e^- then magnetic moment

$$\mu_{BH} = \sqrt{n(n+2)}$$

$$n = 5, \text{ So } \mu = \sqrt{n(n+2)}$$

$$\mu = \sqrt{5(5+2)}$$

$$\mu = \sqrt{35} = 5.96 \text{ BM}$$

Q. 2. Explain the following :

- (i) NH_3 act as a ligand but NH_4^+ does not.
(ii) CN^- is a ambidentate ligand.

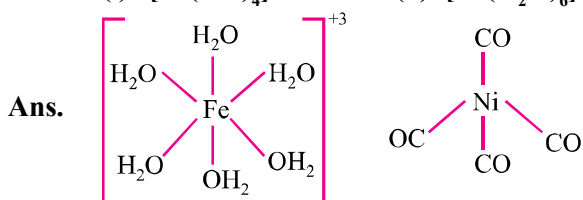
Ans. (i) NH_3 has one lone pair while NH_4^+ does not.

(ii) Because it has two donor atoms in a monodentate ligand.

Q. 3. Mention the main postulates of Werner theory.

- Ans.** (i) Metal ion has two types of valency.
 (ii) Primary valency and secondary valency.
 (iii) Secondary valency is equal to coordination number.

Q. 4. Draw the structure of :



Q. 5. How does EDTA help as a cure for lead poisoning ?

- Ans.** Calcium in Ca-EDTA complex is replaced by lead in the body. The more soluble complexed lead-EDTA is eliminated in urine.

Q. 6. Define homoleptic and heteroleptic complexes.

- Ans. Homoleptic :** When metal atom/ion is linked with one type of ligands. Example, $[\text{Ni}(\text{CO})_4]$.

Heteroleptic : With the more than one kind of ligands. Example, $[\text{Co}(\text{NH}_3)_4\text{Cl}_2]^+$.

Q. 7. $[\text{NiCl}_4]^{2-}$ is paramagnetic while $[\text{Ni}(\text{CO})_4]$ is diamagnetic though both are tetrahedral. Why ?

- Ans.** In $[\text{NiCl}_4]^{2-}$, Ni has $3d^84s^0$ configuration, Cl^- can't pair up while in $[\text{Ni}(\text{CO})_4]$, Ni has $3d^84s^2$ configuration, CO pair up electrons

Q. 8. The oxidation number of cobalt in the complex :



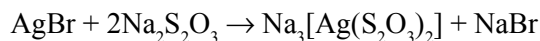
- Ans.** (i) -1 (ii) +3

Q. 9. What are t_{2g} and e_g orbitals ?

- Ans.** In a free transition metal ion, the d -orbitals are degenerate. When it form complex, the degeneracy is split and d -orbitals split into t_{2g} and e_g orbitals.

Q. 10. What is the solution in which photographic film is washed ? What reaction takes place ?

- Ans.** Hypo solution.



Q. 11. What is spectrochemical series ?

- Ans.** The arrangement of ligands in order of their increasing crystal field splitting field strength.

Q. 12. What are the assumptions of Crystal Field theory.

Ans. (i) Ligand act as a point charge.
 (ii) Metal ion has electrostatic attraction force with the ligand.
 (Or any other)

Q. 13. CuSO_4 is colourless while $\text{CuSO}_4 \cdot 5\text{H}_2\text{O}$ is coloured. Why ?

Ans. CuSO_4 does not has any ligand, so splitting of d -orbital take place while $\text{CuSO}_4 \cdot 5\text{H}_2\text{O}$ has water ligand.

Q. 14. What is the difference between inner and outer orbital complexes ?

Ans. **Inner sphere complex :** When d -orbital of inner shell take part in hybridisation.
Outer sphere complex : When d -orbital of outermost shell take part in hybridisation.

Q. 15. How is stability of coordination compound determined in aqueous solution ?

Ans. By using stability constant.
 More stability constant, more stability.

Q. 16. In a complex ion $[\text{Co}(\text{NH}_3)_5\text{NO}_2]\text{Cl}_2$,

- (i) Identify the ligand.
 (ii) Oxidation number of metal ion.

Ans. (i) NH_3 , NO_2 .
 (ii) + 3

Q. 17. Explain how the nature of ligand affects the stability of complex ion.

Ans. Strong ligand : More stability
 Weak ligand : Less stability

Q. 18. What is meant by denticity of a ligand ? Find out denticity of :

- (i) $\text{C}_2\text{O}_4^{2-}$ (ii) EDTA

Ans. The number of ligand group/coordinating group.
 (i) 2 (ii) 6

SHORT ANSWER-II TYPE QUESTIONS (3 Marks)

Q. 1. A coordination compound has the formula $\text{CoCl}_3 \cdot 4\text{NH}_3$. It does not liberate NH_3 but forms a precipitate with AgNO_3 . Write the structure and IUPAC name of the complex compound. Does it show geometrical isomerism ?

Ans. Formula : $[\text{Co}(\text{NH}_3)_4\text{Cl}_2]\text{Cl}$
 Name : Tetraaminedichloridocobalt(III) chloride
 Yes, it show geometrical isomerism.

Q. 2. Why does a tetrahedral complex of the type $[\text{MA}_2\text{B}_2]$ not show geometrical isomerism ?

Ans. Because all position of tetrahedral is same in orientation.

Q. 3. The molar conductivity of the complex $\text{CoCl}_3 \cdot 4\text{NH}_3 \cdot 2\text{H}_2\text{O}$ is found to be same as that of 3 : 1 electrolyte. What is the structural formula. Name and number of geometrical isomer of the complex.

Ans. As coordination number of Co is 6 and complex should be A_3B or AB_3 type, formula is $[\text{Co}(\text{NH}_3)_4(\text{H}_2\text{O})_2]\text{Cl}_3$.

Name : Tetraaminediaqua cobalt (III) chloride

Geometrical isomer : 2 (cis and trans)

Q. 4. $[\text{Ti}(\text{H}_2\text{O})_6]^{3+}$ is coloured while $[\text{Sc}(\text{H}_2\text{O})_6]^{3+}$ is colourless. Why ?

Ans. $[\text{Ti}(\text{H}_2\text{O})_6]^{3+}$: In this case Ti^{+3} has one unpaired e^- while Sc^{+3} does not have any unpaired electron.

Q. 5. Describe with an example of each, the role of coordination compounds in :

(i) Biological system

(ii) Analytical chemistry

(iii) Medicinal chemistry

Ans. (i) Vit. B-12, it is an antipernicious anemia factor.

(ii) Determining and estimation of metal.

(iii) EDTA is used in lead poisoning.

Q. 6. Write the type of isomerism exhibited by the following complexes :

(i) $[\text{Co}(\text{NH}_3)_5\text{Cl}]\text{SO}_4$

(ii) $[\text{Co}(\text{en})_3]^{+3}$

(iii) $[\text{Co}(\text{NH}_3)_6][\text{Cr}(\text{CN})_6]$

Ans. (i) Ionization

(ii) Optical

(iii) Coordination isomerism

Q. 7. Explain the following :

(i) CO is stronger ligand than NH_3 .

(ii) Low spin octahedral complexes of nickel are not known.

(iii) Aqueous solution of $[\text{Ti}(\text{H}_2\text{O})_6]^{+3}$ is coloured.

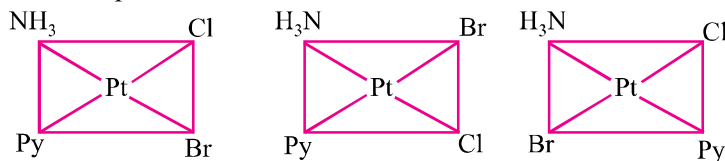
Ans. (i) CO has high value of crystal field splitting energy than Cl.

(ii) Ni has d^8 configuration which does not affect by field strength of ligand.

(iii) In this case, Ti^{+3} has $t_{2g}^1 e_g^0$ configuration. It can perform $d-d$ transition.

Q. 8. Write all the geometrical isomers of $[\text{Pt}(\text{NH}_3)(\text{Br})(\text{Cl})(\text{Py})]$ and how many of these will exhibit optical isomerism ? Here, Py = Pyridine.

Ans. 3 isomers are possible.



Monodentate ligand in square planar complex do not show optical isomerism.

LONG ANSWER TYPE QUESTIONS (5 Marks)

Q. 1. A metal ion M^{n+} having d^4 valence electronic configuration combines with three didentate ligands to form a complex compound. Assuming $\Delta_o > p$:

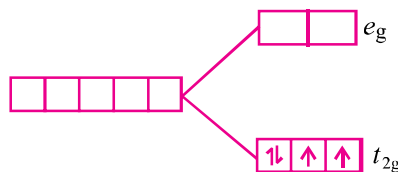
(i) Draw the diagram showing d -orbital splitting during this complex formation.

(ii) What type of hybridisation will M^{n+} have ?

(iii) Name the type of isomerism exhibited by this complex.

(iv) Write the electronic configuration of metal M^{n+} .

Ans. (i) If $\Delta_o > p$ then



(ii) d^2sp^3

(iii) $[M(AA)_3]$ type complex show optical isomerism.

(iv) $t_{2g}^4 e_g^0$

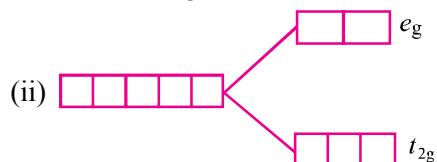
Q. 2. (i) Discuss the nature of bonding in metal carbonyls.

(ii) Draw figure to show the splitting of d -orbitals in an octahedral crystal field and write electronic configuration of M^{2+} ion when :

(a) $p > \Delta_o$

(b) $\Delta_o > p$

Ans. (i) The metal carbon bond in metal carbonyls possess both σ and π character. The $M - C$ σ bond is formed by the $M \leftarrow C \equiv O$ while $M - C$ π bond is formed by the donation of a pair of electron from filled d -orbital of metal to antibonding π^* orbital of CO.



(a) $t_{2g}^3 e_g^2$

(b) $t_{2g}^5 e_g^0$

Q. 3. (i) $[\text{Fe}(\text{CN})_6]^{4-}$ and $[\text{Fe}(\text{H}_2\text{O})_6]^{2+}$ are of different colours in dilute solution. Why ?

(ii) A complex is prepared by mixing CoCl_3 and NH_3 in the molar ratio of 1 : 4. 0.1M solution of this complex was found to be freeze at -0.372°C . What is the formula of the complex ? $K_f = 1.86^\circ \text{C/M}$

Ans. (i) In both the cases Fe is in + 2 state, it has 4 unpaired electrons but CN^- and H_2O has different crystal field splitting energy.

(ii) $\Delta T_f = i.K_f.m$

$i = 2$ means complex dissociate into two ions.

Hence the formula is $[\text{Co}(\text{NH}_3)_4\text{Cl}_2]\text{Cl}$

VALUE BASED QUESTIONS (4 Marks)

Q. 1. A lots of children, working in a lead industry were rescued by NGO's activists. The children were sent to the hospital and found to be excess exposure to lead so called lead poisoning. Lead is very poisonous.

(i) Name the ligand (compound) used for treatment of lead poisoning.

(ii) Name the cell wherein lead is used.

(iii) Write the reaction involved for removal of lead from living organism.

(iv) During this rescue operation, which values are shown by NGO's activists ?

Q. 2. Cancer is not a communicable disease. It occurs due to unlimited growth of body cells leading to tumours. We should shake hands, eat together with people suffering from cancer. These activities boost up the confidence in them for living.

(i) Write the name of coordination compound used as a chemotherapeutic agent to curb the growth of tumours.

(ii) Draw the structure of this coordination compound.

(iii) How is copper poisoning treated by the use of Ca-EDTA complex ?

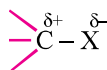
(iv) By showing such attitude to cancer patients, mention the values reflected by us.

UNIT 10

HALOALKANES AND HALOARENES

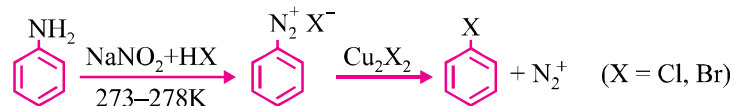
Points to Remember

1. Haloalkanes (Alkyl halides) are halogen derivatives of alkanes with general formula $[C_nH_{2n+1}X]$. (X = F, Cl, Br or I)
2. Haloarenes (Aryl halides) are halogen derivatives of arenes with general formula $Ar - X$.
3. Since halogen is more electronegative than C, hence C - X bond is polar.

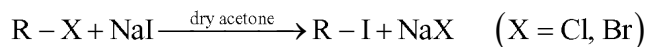


4. Named Reactions :

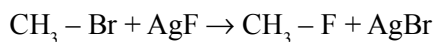
(a) Sandmeyer Reaction :



(b) Finkelstein Reaction :

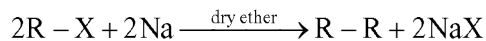


(c) Swartz Reaction :

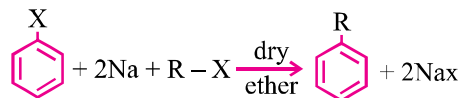


Instead of Ag - F, other metallic fluoride like Hg_2F_2 , CoF_2 or SbF_3 can also be used.

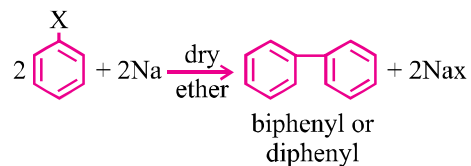
(d) Wurtz Reaction :



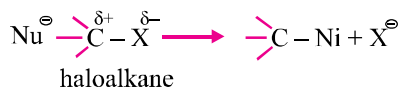
(e) Wurtz-Fittig Reaction :



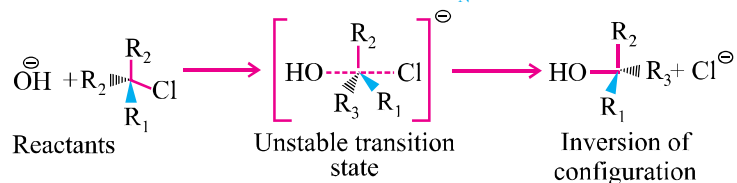
(f) Fittig Reaction :



5. Nucleophilic Substitution Reactions :



(a) Substitution nucleophilic bimolecular (S_N^2) :

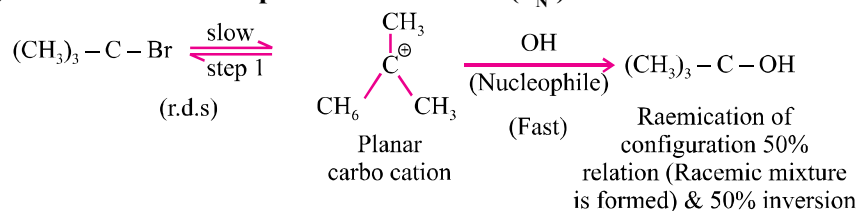


1. 1° haloalkane
2. Bimolecular, 2nd order
3. One step

Order of reactivity : $1^\circ > 2^\circ > 3^\circ$

Deciding factor : Steric hindrance

(a) Substitution nucleophilic unimolecular (S_N^1) :



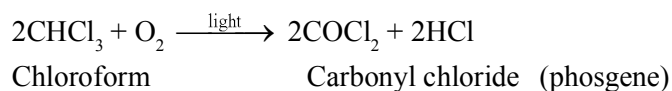
1. 3° haloalkane
2. Unimolecular, 1st order
3. Two steps

Order of reactivity : $3^\circ > 2^\circ > 1^\circ$

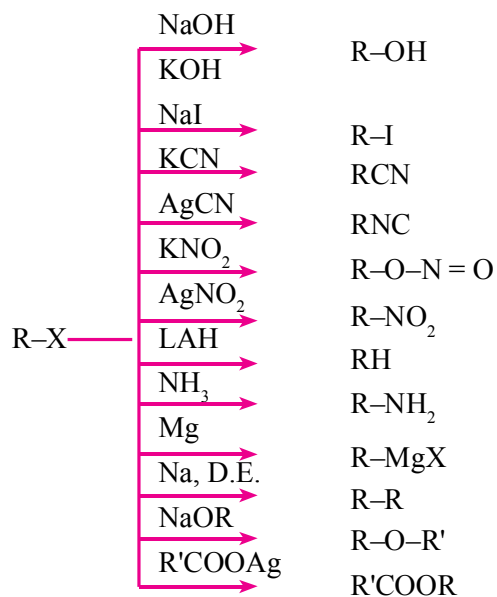
Deciding factor : Stability of carbo cation

* Allylic $\left[\text{CH}_2 = \text{CH} - \overset{\oplus}{\text{C}}\text{H}_2 \right]$ and benzylic $\left[\text{C}_6\text{H}_5 - \overset{\oplus}{\text{C}}\text{H}_2 \right]$ halides undergo reaction via S_N^1 mechanism as the corresponding carbo cations are resonance stabilized.

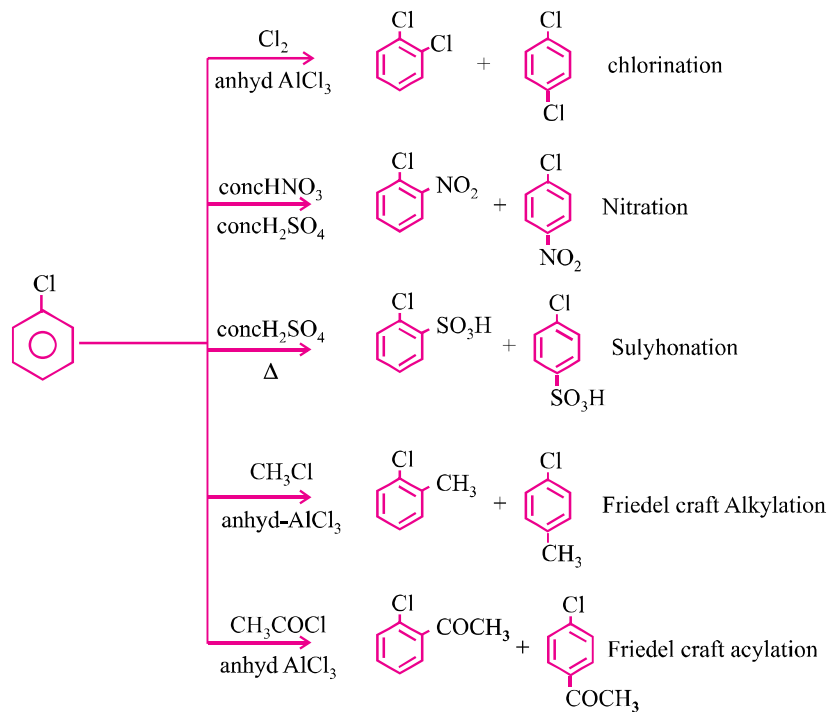
6. Aryl halides are much less reactive towards nucleophilic substitution reactions than haloalkanes.
7. Halogen is deactivating but *o*, *p*-directing in electrophilic substitution reaction of haloarenes.
8. CHCl_3 is stored in dark bottles upto brim so that formation of poisonous gas phosgene in presence of air and light can be avoided.



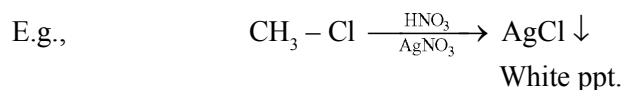
9. Reaction of Haloalkanes :



10. Electrophilic Substitution Reaction of Haloarenes :



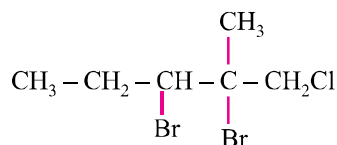
11. Distinguishing test for alkyl chlorides, bromides and iodide : Alkyl chlorides react with AgNO_3 to give white precipitate which is soluble in alcoholic ammonium hydroxide. Alkyl bromides react with AgNO_3 to give a yellow precipitate which is sparingly soluble in alcoholic ammonium hydroxide. Alkyl iodides react with AgNO_3 to give dirty yellow precipitate, which is insoluble in alcoholic ammonium hydroxide.



Vinyl and aryl halides do not yield silver halide under these conditions.

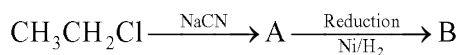
VERY SHORT ANSWER TYPE QUESTIONS (1 Mark)

Q. 1. Give IUPAC name of :



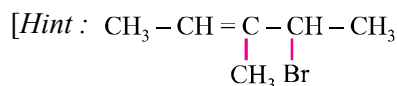
[Hint : 1-chloro-2, 3-dibromo-2-methyl pentane]

Q. 2. Identify A and B in each of the following processes :



[Hint : A : $\text{CH}_3 - \text{CH}_2 - \text{CN}$; B : $\text{CH}_3\text{CH}_2\text{CH}_2\text{NH}_2$]

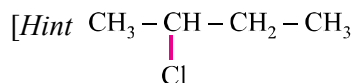
Q. 3. Draw the structure of 4-bromo-3-methylpent-2-ene.



Q. 4. Why Grignard reagent should be prepared under anhydrous conditions ?

Q. 5. Chloroform is stored in dark coloured and sealed bottles. Why ?

Q. 6. An alkyl halide having molecular formula $\text{C}_4\text{H}_9\text{Cl}$ is optically active. What is its structure ?



Q.7. An organic compound 'A' on treatment with KCN gave B which on hydrolysis with dil. HCl gave acetic acid. Identify A.

[Hint : A : CH_3Cl]

Q. 8. Write IUPAC name of iodoform.

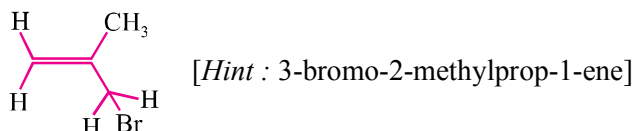
[Hint : Triiodomethane]

Q. 9. Which one of the following two substances undergo SN^1 reaction faster and why ?



Q. 10. Haloalkanes react with KCN to form alkyl cyanides as main product while AgCN form isocyanides as the chief product. Explain.

Q. 11. Write the IUPAC name of the following compound :



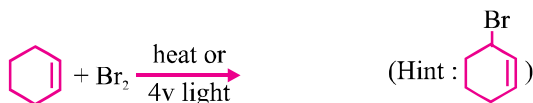
Q. 12. Arrange the following in order of their increasing reactivity in nucleophilic substitution reactions :



[Hint : $\text{CH}_3\text{F} < \text{CH}_3\text{Cl} < \text{CH}_3\text{Br} < \text{CH}_3\text{I}$]

Q. 13. Allyl chloride is more reactive than n-propyl chloride towards nucleophilic substitution reaction. Explain why ?

Q. 14. Complete the reaction :



Q. 15. How will you convert 2-bromo propane into 1-bromo propane ?

Q. 16. Give one chemical test to distinguish between chlorobenzene and benzyl chloride ?

[Hint : AgNO_3 test]

Q. 17. Why iodoform show antiseptic properties ?

[Hint : Due to free liberated iodine.]

Q. 18. Optically active 2-iodobutane on treatment with NaI in acetone gives a product which does not show optical activity. Explain.

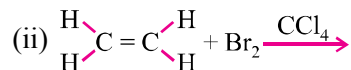
[Hint : Racemic mixture is obtained.]

Q. 19. The presence of nitro group ($-\text{NO}_2$) at ortho or para positions increases the reactivity of haloarenes towards nucleophilic substitution reactions. Explain.

Q. 20. For the preparation of alkyl chlorides from alcohols, thionyl chloride (SOCl_2) is preferred. Give reason.

SHORT ANSWER-I TYPE QUESTIONS (2 Marks)

Q. 1. Complete the following reactions :



Q. 2. Carry out the following conversions in not more than two steps :

(i) Toluene to benzyl alcohol

(ii) Benzyl alcohol to phenylethanenitrile

Q. 3. Give reasons :

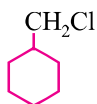
(i) Boiling point of alkyl bromide is higher than alkyl chloride.

(ii) Alkyl halides are better solvents than aryl halides.

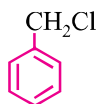
[Hint : (i) High magnitude of van der Waal's forces in alkyl bromides.

(ii) C – X is more polar in haloalkanes.]

Q. 4. Which of the following compounds would undergo S_N1 reaction faster and why ?



(A)



(B)

Hint : (A)

Q. 5. Identify and indicate the presence of centre of chirality, if any, in the following molecules. How many stereoisomers are possible for those containing chiral centre :

(i) 1, 2-dichloropropane

(ii) 3-bromopent-1-ene

Q. 6. Convert :

(i) Benzene to m-nitrochlorobenzene

(ii) Benzene to diphenyl

Q. 7. What happens when :

(i) Propene is treated with HBr in presence of peroxide.

(ii) Benzene is treated with methyl chloride in presence of $AlCl_3$.

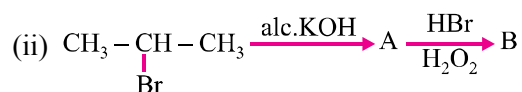
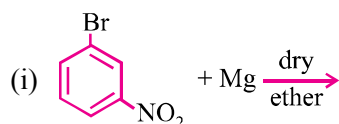
Q. 8. (i) An alkyl halide having molecular formula C_4H_9Cl is optically active. What is its structure ?

(ii) Alkyl iodides develop colouration on long standing particularly in light. Explain.

[Hint : (i) $CH_3 - CH(Cl) - CH_2 - CH_3$

(ii) Due to decomposition by light and produce I_2 .]

- Q. 9.** Tert-butyl bromide reacts with aq. NaOH by S_N^1 mechanism while n-butyl bromide reacts with S_N^2 mechanism. Why ?
- Q. 10.** Although chlorine is an electron withdrawing group, yet it is o, p-directing in electrophilic aromatic substitution reactions. Explain, why is it so ?
- Q. 11.** Identify the products :

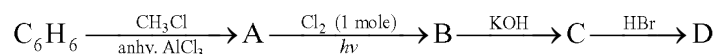


- Q. 12.** (i) Arrange the following halides in order of increasing S_N^1 reactivity :



- (ii) Which out of 1-bromobutane & 2-bromobutane would react faster by S_N^2 pathway and why ?

- Q. 13.** Identify the products :



- Q. 14.** Carry out the following conversions :

- (i) But-1-ene to n-butyliodide
(ii) Isopropyl alcohol to iodoform

- Q. 15.** An organic compound A reacts with PCl_5 to give compound B. Compound B reacts with Na/ether to give n-butane. What are compounds A and B ?

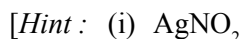


- Q. 16.** Write short note on :

- (i) Sandmeyer reaction
(ii) Finkelstein reaction

- Q. 17.** Name the reagents used to convert :

- (i) 2-chloropropane to 2-nitropropane
(ii) Chloroethane to n-butane



- (ii) Na/dry ether]

SHORT ANSWER-II TYPE QUESTIONS (3 Marks)

Q. 1. Rearrange the compounds of each of the following sets in order of reactivity towards S_N^2 displacement :

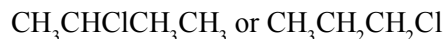
- (i) 2-bromo-2-methyl butane, 1-bromopentane, 2-bromopentane
- (ii) 1-bromo-3-methylbutane, 2-bromo-2-methyl butane, 3-bromo-2-methyl butane
- (iii) 1-bromobutane, 1-bromo-2, 2-dimethyl propane, 1-bromo-2-methyl butane

Q. 2. Answer the following :

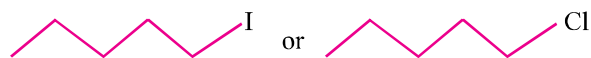
- (i) Haloalkanes easily dissolve in organic solvents, why ?
- (ii) What is known as racemic mixture ? Give example.
- (iii) Of the two bromo derivatives, $C_6H_5CH(CH_3)Br$ and $C_6H_5CH(C_6H_5)Br$, which one is more reactive in S_N^1 substitution reaction and why ?

Q. 3. Answer the following :

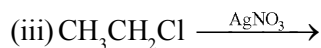
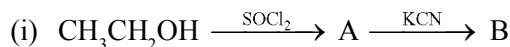
- (i) What is meant by chirality of a compound ? Give an example.
- (ii) Which one of the following compounds is more easily hydrolysed by KOH and why ?



- (iii) Which one undergo S_N^2 substitution reaction faster and why ?



Q. 4. Complete the following reactions :



Q. 5. How the following conversions can be carried out ?

- (i) But-1-ene to n-butyl iodide
- (ii) Tert-butyl bromide to isobutyl bromide
- (iii) Ethanol to but-1-yne

Q. 6. Write short notes on :

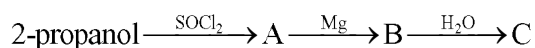
- (i) Wurtz-Fittig reaction
- (ii) Fittig reaction
- (iii) Dehydrohalogenation reaction

Q. 7. An organic compound 'A' having molecular formula C_4H_8 on treatment with dil. H_2SO_4 give another compound 'B'. B on treatment with conc. HCl and anhy. $ZnCl_2$ gives 'C'. C on treatment with sodium ethoxide gives back 'A'. Identify the compound. Write the equations involved.

Q. 8. What happens when :

- (i) 1-bromopropane reacts with metallic sodium.
- (ii) Bromoethane is treated with caustic potash.
- (iii) Iodomethane is treated with ammonia.

Q. 9. Identify A, B and C :



Q. 10. Account for the following :

- (i) A small amount of ethyl alcohol is added to $CHCl_3$ stored for use as an anaesthetic.
- (ii) After using CCl_4 as a fire extinguisher inside a closed space, the space is thoroughly ventilated.
- (iii) When 2-chloro-3-methylbutane is treated with alcoholic potash, 2-methyl-2-butene is the main product.

[Hint : (i) To convert harmful $COCl_2$ to ethyl carbonate.

- (ii) To sweep out $COCl_2$ formed by CCl_4 vapour and H_2O vapour.
- (iii) Saytzeff rule.

Q. 11. How will you distinguish between :

- (i) Vinyl chloride and ethyl chloride
- (ii) Chlorobenzene and cyclohexyl chloride
- (iii) Ethyl chloride and ethyl bromide

Q. 12. Explain the following :

- (i) The dipole moment of chloroethane is higher than that of chlorobenzene.
- (ii) Although halo alkanes are polar in character yet they are insoluble in water.
- (iii) Vinyl chloride is unreactive in nucleophilic substitution reactions.

Q. 13. (i) Which will have a higher boiling point ?

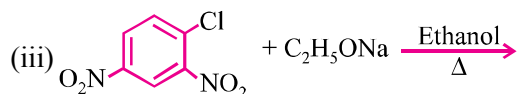
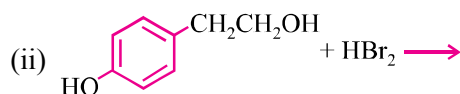
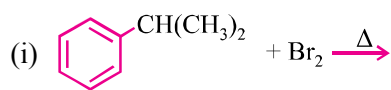
1-chloroethane or 2-chloro-2-methyl butane. Give reason.

- (ii) p-chloronitrobenzene undergoes nucleophilic substitution faster than chlorobenzene. Explain giving resonating structure as well.

Q. 14. (i) What are ambident nucleophiles ? Explain with an example.

- (ii) Convert ethyl bromide to diethyl ether.
- (iii) What are freons ?

- Q. 15.** A hydrocarbon 'A' (C_4H_8) is added with HBr in accordance with Markonikov's rule to give compound 'B' which on hydrolysis with aqueous alkali forms tertiary alcohol 'C' ($C_4H_{10}O$). Identify A, B and C.
- Q. 16.** (i) Which isomer of C_4H_9Cl will have the lowest boiling point ?
 (ii) Predict the alkenes that would be formed by dehydrohalogenation with sodium ethoxide and ethanols. Predict major alkenes :
 (a) 2-chloro-2-methylbutane
 (b) 3-bromo-2, 2, 3-trimethylpentane
- Q. 17.** Write the structure of major product in each of the following :



- Q. 18.** Write the main products when :
- (i) n-butyl chloride is treated with alcoholic KOH
 (ii) 2, 4, 6-trinitrochlorobenzene is subjected to hydrolysis.
 (iii) Methyl chloride is treated with AgCN.

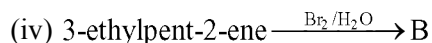
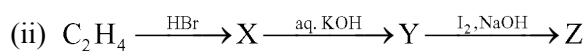
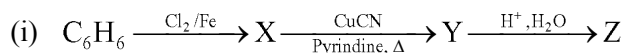
LONG ANSWER TYPE QUESTIONS (5 Marks)

- Q. 1.** How would you bring about the following conversions :
- (i) Propene to 2-bromopropane
 (ii) Bromoethane to propanoic acid
 (iii) 1-chloropropane to 1-propanol
 (iv) Ethanol to chloroethane
 (v) 1-iodopropane to propene

Q. 2. What happens when : (Give chemical reactions)

- (i) Cyclohexanol is treated with thionyl chloride
- (ii) p-hydroxybenzyl alcohol is heated with HCl.
- (iii) Ethyl bromide is refluxed with NaI in acetone.
- (iv) Ethyl bromide is treated with mercurous fluoride.
- (v) Chlorobenzene is subjected to hydrolysis.

Q. 3. Complete the following reactions :

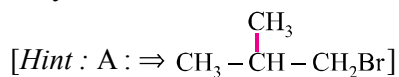


Q. 4. Account for the following :

- (i) Sulphuric acid is not used during the reaction of alcohols with KI.
- (ii) p-methoxybenzyl bromide reacts faster than p-nitrobenzyl bromide with ethanol to form an ether product.
- (iii) Organic halogen compounds used as solvents in industry are chlorides rather than bromides and iodides.
- (iv) Wurtz reaction fails in case of tert-alkyl halides.
- (v) Alkyl halides are insoluble in water though they contain a polar C – X bond.
- (vi) Use of CHCl_3 as anaesthetic is not preferred.

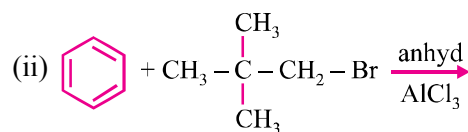
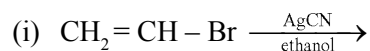
Q. 5. (i) A primary alkyl halide (A), $\text{C}_4\text{H}_9\text{Br}$ reacted with hot alcoholic KOH to give compound (B). Compound (B) reacted with HBr to give (C), which is an isomer of (A). When (A) was reacted with sodium metal, it gave a compound (D), C_8H_{18} which was different than the compound when n-butyl bromide was reacted with sodium. Give the structural formula of (A) and write equations of all the reactions.

(ii) Iodoform gives a precipitate with AgNO_3 on heating while CHCl_3 does not. Why ?

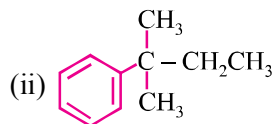


HOTS

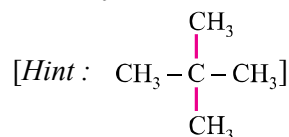
- Q. 1.** Why alkyl halides are generally not prepared in laboratory by free radical halogenations of alkanes ?
- Q. 2.** Hydrolysis of 2-bromo-3-methylbutane (2°) gives only α -methyl-2-butanol (3°). Explain.
- Q. 3.** Write major product of the following reactions :



[Hint : (i) No reaction



- Q. 4.** A hydrocarbon of molecular mass 72 g mol^{-1} gives a single monochloro derivative and two dichloro derivatives on photochlorination. Give the structure of the hydrocarbon.



- Q. 5.** Cyanide ion acts as an ambident nucleophile. From which end it acts as a stronger nucleophile in aqueous medium ? Give reason for your answer.

MULTIPLE CHOICE QUESTIONS

- Q. 1.** The chiral compound is :

- (a) 3-chloropentane (b) Propene
(c) 2-chloropropane (d) 2-chlorobutane

Ans. (d)

- Q. 2.** Chloroethane on heating with alcoholic KOH gives :

- (a) Ethane (b) Ethene
(c) Ethyne (d) Ethyl alcohol

Ans. (b)

- Q. 3.** Phosgene is a common name for :
- (a) Phosphoryl chloride (b) Carbonyl chloride
(c) Carbon dioxide & phosphine (d) Carbon tetrachloride

Ans. (b)

- Q. 4.** Which of the following possesses highest melting point ?
- (a) Chlorobenzene (b) n-dichlorobenzene
(c) o-dichlorobenzene (d) p-dichlorobenzene

Ans. (d)

- Q. 5.** KCN reacts readily to form a cyanide with :
- (a) Ethyl alcohol (b) Ethyl bromide
(c) Bromobenzene (d) Chlorobenzene

Ans. (b)

VALUE BASED QUESTIONS (4 Marks)

- Q. 1.** Chloroform is a colourless oily liquid with a peculiar smell. It is sparingly soluble in water. The vapour when inhaled causes unconsciousness and therefore, it is used as an anaesthetic.

Answer the following questions :

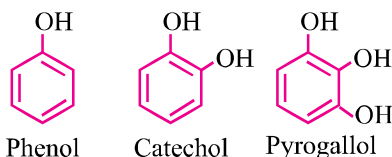
- (i) What happens when CHCl_3 is not protected from O_2 during its storage ?
(ii) Why is the use of CHCl_3 as an anaesthetic has been reduced ?
- Q. 2.** DDT is one of the most powerful insecticide which is effective against the mosquitoes that spread malaria. Mukesh's mother wanted to buy DDT from the market to use at night but Mukesh stopped her.
- (i) Why did Mukesh stop her mother for using DDT at night ?
(ii) What values are attached to Mukesh's suggestion ?

UNIT-11

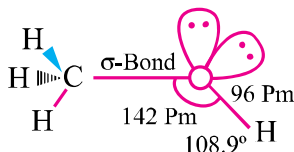
ALCOHOLS, PHENOLS AND ETHERS

Quick Concepts to Remember

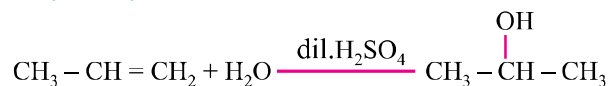
1. Hydroxyl (– OH) derivatives of alkane are called alcohols.
2. Alcohols are classified as 1°, 2° and 3°.
3. –OH group is attached to sp^3 hybridized carbon. Alcohols further may be monohydric, dihydric and polyhydric on the basis of OH group.
4. **Phenols** : Compounds containing – OH group bound directly to benzene ring.



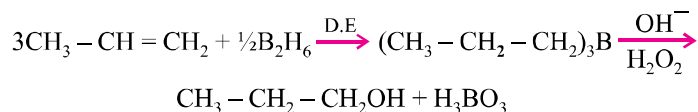
5. **Structure** : Oxygen atom is sp^3 hybridised and tetrahedral geometry of hybrid atomic orbitals ROH bond angle depends upon the R group. R – O – H angle for $\text{CH}_3 - \text{OH}$ is 108.9° .

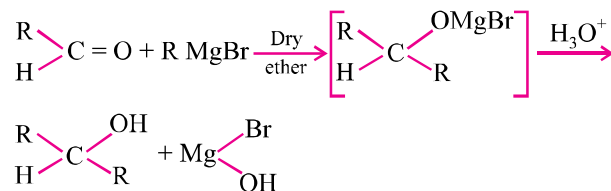


6. **Isomerism** :
 - (i) Functional isomerism
 - (ii) Chain isomerism
 - (iii) Positional isomerism
7. **General Methods of Preparation** :
 - (i) **Acid catalysed hydration of alkenes** :

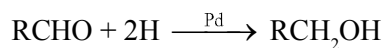
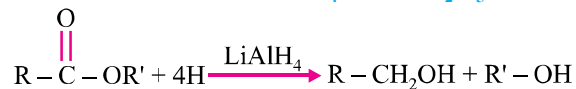
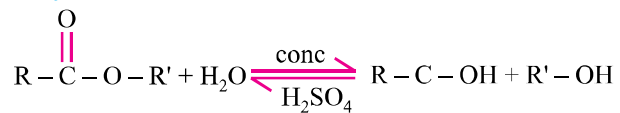
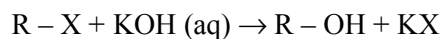
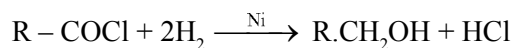
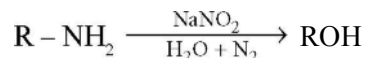


- (ii) **Hydroboration oxidation** :



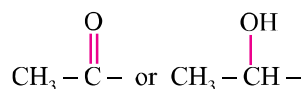
(iii) From carbonyl compounds with Grignard's reagent :

Formaldehyde gives 1° alcohol and ketones gives tertiary alcohol.

(iv) By reduction of carbonyl compounds :**(v) By reduction of esters with LiAlH₄ or Na/C₂H₅OH :****(vi) By hydrolysis of esters :****(vii) From alkyl halides :****(viii) By reduction of acids and their derivatives :****(ix) From 1° amines :**

8. Ethers are dialkyl derivatives of water or monoalkyl derivatives of alcohols with formula
9. Lucas test can be used to distinguish primary, secondary and tertiary alcohols (ZnCl₂ + HCl).
(3° turbidity – instant, 2° - 5 minutes, 1° - heating for 60 minutes)
10. Ethers are relatively inert and hence are used as solvents.

11. 100% ethanol is known as absolute alcohol.
12. 95% ethanol is called rectified spirit.
13. A mixture of 20% ethanol and 80% gasoline is known as power alcohol.
14. Iodoform test is used for distinguishing compounds having the groups



15. Presence of EWGs increase the acid strength of phenols while ERGs decrease the acid strength.

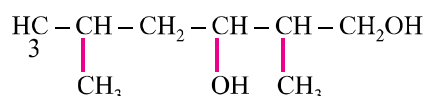
EWG : $-\text{NO}_2$, $-\text{X}$, $-\text{CN}$, $-\text{COOH}$ etc.

ERG : $-\text{R}$, $-\text{OR}$, $-\text{OH}$, $-\text{NH}_2$ etc.

16. 3° alcohols are resistant to oxidation due to lack of α -hydrogen.
17. Intermolecular H-bonds of *p*- and *m*-nitrophenol increases water solubility/acid strength while intramolecular H-bonds in *o*-nitrophenol decreases these properties.
18. In the reaction of alkyl aryl ether (anisole) with HI, the products are always alkyl halide and phenol because O – R bond is weak than O – Ar bond which has partial double character due to resonance.
19. C – O – C bond in ether is bent and hence the ether is always polar molecule even if both alkyl groups are identical.

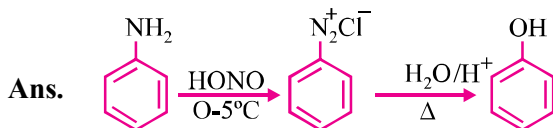
VERY SHORT ANSWER TYPE QUESTIONS (1 Mark)

Q. 1. Write IUPAC name of the following compound :



Ans. 2,5-Dimethylhexane-1, 3 diol.

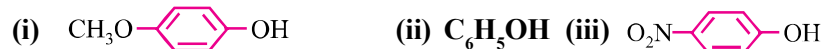
Q. 2. How is phenol obtained from aniline ?



Q. 3. Why phenol is acidic in nature ?

Ans. Due to stability of phenoxide ion by resonance.

Q. 4. Arrange the following in decreasing order of their acidic character :



Ans. (iii) > (ii) > (i)

Q. 5. Among HI, HBr and HCl, HI is most reactive towards alcohols. Why ?

Ans. Due to lowest bond dissociation energy of HI.

Q. 6. Name a compound which is used as antiseptic as well as disinfectant.

Ans. Solution of phenol : 0.2% antiseptic, 2% disinfectant.

Q. 7. What is nitrating mixture ?

Ans. Conc. ($\text{H}_2\text{SO}_4 + \text{HNO}_3$)

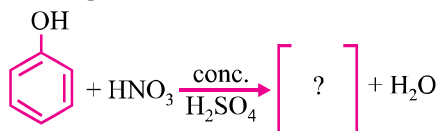
Q. 8. Lower alcohols are soluble in water, higher alcohols are not. Why ?

Ans. Due to formation of hydrogen bonds.

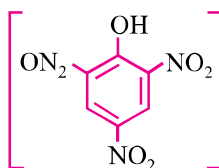
Q. 9. What happens when $\text{CH}_3\text{CH}_2\text{OH}$ heated with red P and HI ?

Ans. $\text{C}_2\text{H}_5\text{OH} + 2\text{HI} \xrightarrow{\text{Red P}} \text{C}_2\text{H}_6 + \text{I}_2 + \text{H}_2\text{O}$

Q. 10. Complete the following reaction :



Ans.



2, 4, 6-Trinitro phenol (Picric acid)

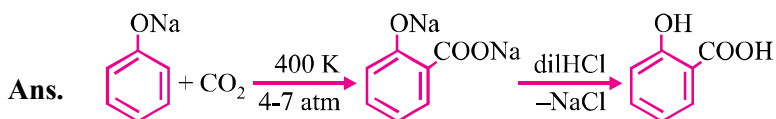
Q. 11. Ethanol has higher boiling point than methoxy methane. Give reason.

Ans. Because of H-bonds.

Q. 12. How could you convert ethanol to ethane ?

Ans. $\text{C}_2\text{H}_5\text{OH} \xrightarrow[443 \text{ K}]{\text{Conc. H}_2\text{SO}_4} \text{CH}_2 = \text{CH}_2 + \text{H}_2\text{O}$

Q. 13. Explain Kolbe's reaction with example.

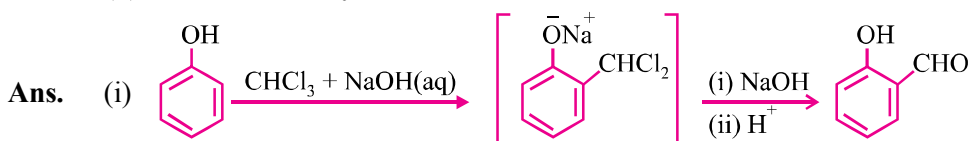


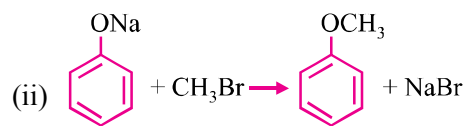
SHORT ANSWER-I TYPE QUESTIONS (2 Marks)

Q. 1. Write one chemical reaction to illustrate the following :

(i) Reimer-Teimann reaction

(ii) Williamson's synthesis





Q. 2. Account for the following :

(i) Phenol has a smaller dipole moment than methanol.

(ii) Phenol goes electrophilic substitution reactions.

Ans. (i) Due to -ve charge on oxygen in delocalized by resonance.

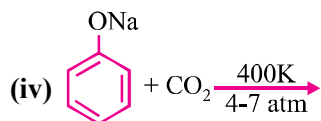
(ii) Due to greater electron density than benzene.

Q. 3. Complete the following equations and name the products :

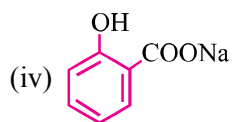
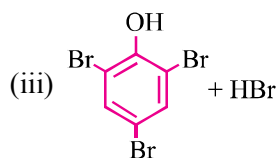
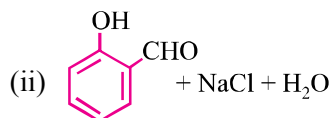
(i) Phenol + $\text{FeCl}_3 \rightarrow$

(ii) $\text{C}_6\text{H}_5\text{OH} + \text{CHCl}_3 + \text{NaOH} \xrightarrow{340\text{K}}$

(iii) $\text{C}_6\text{H}_5\text{OH} + \text{Br}_2 (\text{aq}) \rightarrow$



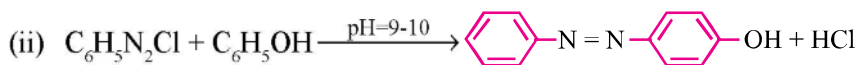
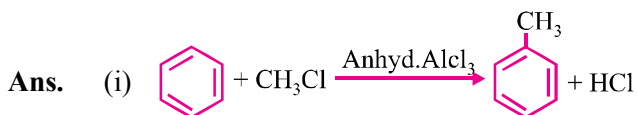
Ans. (i) $[(\text{C}_6\text{H}_5\text{O})_6\text{Fe}]^{3-} + \text{HCl} + \text{H}^+$



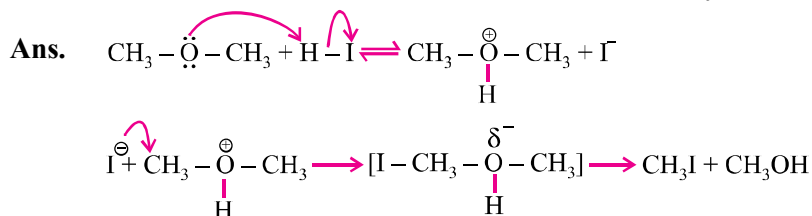
Q. 4. Write :

(i) Friedel-Crafts reaction

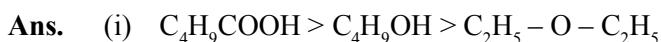
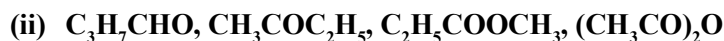
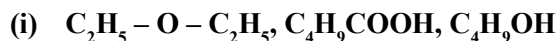
(ii) Coupling reaction



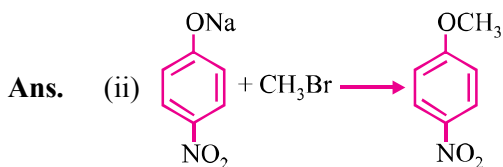
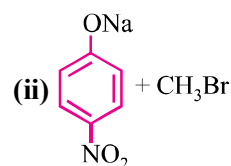
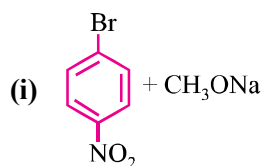
Q. 10. Write mechanism of reaction of HI with methoxymethane.




Q. 11. Arrange in order of boiling points :



Q. 12. Which of the following is an appropriate set of reactants for the preparation of 1-methoxy-4-nitrobenzene and why ?

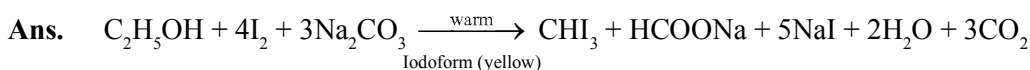


It is because of double bond character, (C – Br) bond in  due to resonance it is less reactive towards $\text{S}_\text{N}2$, R_X .

Q. 13. Ethers are relatively inert. Justify.

Ans. Due to absence of any active site in their molecules, divalent oxygen is linked to carbon atoms on both sides $\left(\text{C} - \overset{\cdot\cdot}{\underset{\cdot\cdot}{\text{O}}} - \text{C} \right)$.

Q. 14. How will you distinguish between CH_3OH and $\text{C}_2\text{H}_5\text{OH}$?



CH_3OH does not give this test.

SHORT ANSWER-II TYPE QUESTIONS (3 Marks)

Q. 1. Name the reagents which are used in the following conversions :

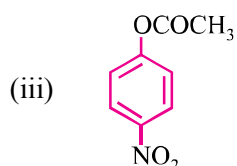
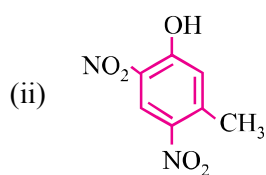
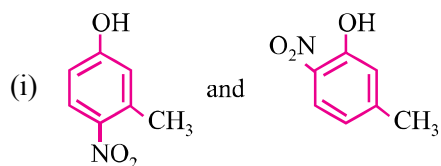
- (i) 1° alcohol to an aldehyde
- (ii) Butan-2-one to butan-2-ol
- (iii) Phenol to 2, 4, 6 tribromophenol

Ans. (i) PCC, a complex of chromium trioxide with pyridine and HCl.
 (ii) NaBH_4 , sodium borohydride.
 (iii) Br_2 (water)

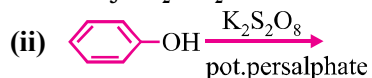
Q. 2. Write structures of the major products of the following :


- (i) Mononitration of 3-methylphenol
- (ii) Dinitration of 3-methylphenol
- (iii) Mononitration of phenyl methanoate

Ans. –OH and –CH₃ are *o*- and *p*-directing groups. The products are :



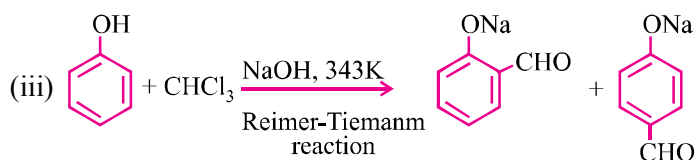
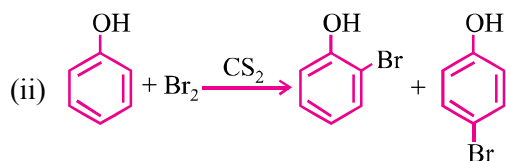
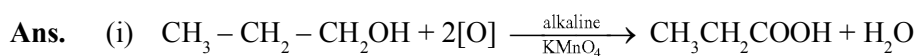
Q. 3. Complete the following reactions :



- Ans.** (i) $\text{CH}_3\text{CH}_2\text{CH}_2\text{CH}_2\text{OH}$
 (ii) 
 (iii) CH_3I
 (iv) $\text{C}_2\text{H}_5\text{Cl}$
 (v) $\text{CH}_2\text{OH} - \text{CH}_2\text{OH}$
 (vi) $\text{CH}_3\text{CH}_2\text{OH}$

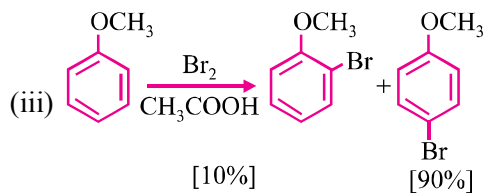
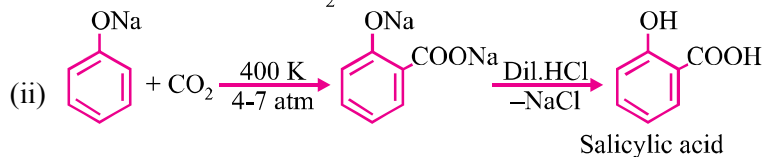
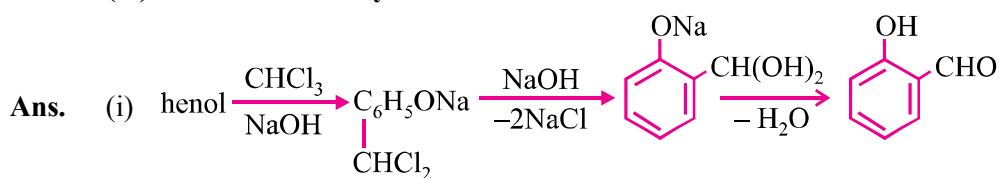
Q. 4. Give equations of the following reactions :

- (i) Oxidation of propan-1-ol with alkaline KMnO_4 solution.
 (ii) Bromine in CS_2 with phenol.
 (iii) Treating phenol with chloroform in presence of aqueous NaOH .



Q. 5. Describe the following reactions with examples :

- (i) Reimer-Tiemann reaction
 (ii) Kolbe's reaction
 (iii) Friedel Crafts acylation of anisole



Q. 6. Dehydration of alcohols to form an alkene is always carried out with conc. H_2SO_4 and not with conc. HCl or HNO_3 . Explain.

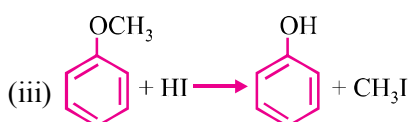
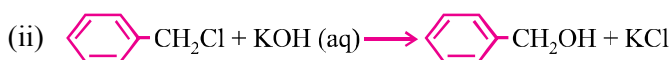
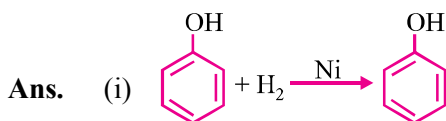
Ans. In acidic medium alcohols protonated then loses H_2O to form a carbo cation. If HCl Cl^- strong nucleophile cause nucleophilic substitution, HNO_3 causes oxidation.

Q. 7. How will you convert :

(i) Phenol to cyclohexanol

(ii) Benzene chloride to benzyl alcohol

(iii) Anisole to phenol



LONG ANSWER TYPE QUESTIONS (5 Marks)

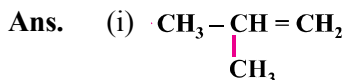
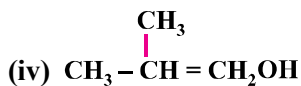
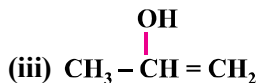
Q. 1. An alcohol A ($\text{C}_4\text{H}_{10}\text{O}$) on oxidation with acidified $\text{K}_2\text{Cr}_2\text{O}_7$ gives carboxylic acid 'B' ($\text{C}_4\text{H}_8\text{O}_2$). Compound 'A' when dehydrated with conc. H_2SO_4 at 443 K gives compound 'C' with aqueous H_2SO_4 . 'C' gives compound 'D' ($\text{C}_4\text{H}_{10}\text{O}$) which is an isomer of 'A'. Compound 'D' is resistant to oxidation but compound 'A' can be easily oxidized. Identify A, B, C and D and write their structure.

Ans. A : $(\text{CH}_3)_2\text{CH}_2\text{CH}_2\text{OH}$ B : $\text{CH}_3\text{CH}(\text{CH}_3)\text{COOH}$
C : $(\text{CH}_3)_2\text{C}=\text{CH}_2$ D : $(\text{CH}_3)_3\text{C}-\text{OH}$

Q. 2. An ether 'A' ($\text{C}_5\text{H}_{12}\text{O}$) when heated with excess of hot concentrated HI produced two alkyl halides which on hydrolysis form compounds B and C. Oxidation of B gives an acid D whereas oxidation of C gave a ketone E. Deduce the structures of A, B, C, D and E.

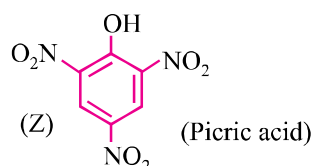
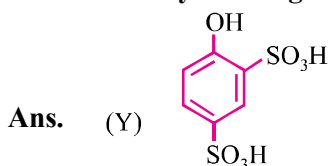
Ans. A : $\text{CH}_3\text{CH}_2\text{OCH} \begin{matrix} \text{CH}_3 \\ \text{CH}_3 \end{matrix}$
B : $\text{CH}_3\text{CH}_2\text{OH}$
C : $\text{CH}_3\text{CHOHCH}_3$
D : CH_3COOH
E : CH_3COCH_3

Q. 3. Which of the following compounds gives fastest reaction with HBr and why ?



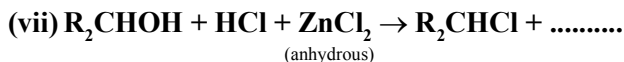
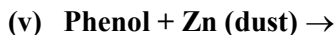
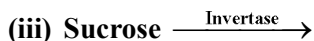
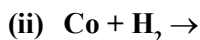
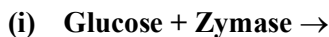
Due to formation of EDG and formation of cation.

Q. 4. Phenol, $\text{C}_6\text{H}_5\text{OH}$ when it first reacts with concentrated sulphuric acid, forms Y. The compound, Y is reacted with concentrated nitric acid to form Z. Identify Y and Z and explain why phenol is not converted commercially to Z by reacting it with conc. HNO_3 .



Phenol is not reacted directly with conc. HNO_3 because the yield of picric acid is very poor.

Q. 5. Fill in the blanks :



- Ans.** (i) C_2H_5OH (ii) CH_3OH
 (iii) Glucose (iv) $C_6H_{12}O_6$
 (v) C_6H_6 (vi) C_6H_5ONa
- (vii) H_2O (viii) $R - \overset{O}{\parallel} C - R$
 (ix) SO_2 (x) $CHCl_3$

VALUE BASED QUESTIONS (4 Marks)

- Q. 1.** An owner of a paint company who was using ethanol as solvent noted that his stock of ethanol was misused by his employees. To prevent this, he decided to add small amount of blue coloured compound (A) and another nitrogen containing heterocyclic base (B) which gives a foul smell to alcohol.
- Do you think that he took right decision and mention the values with this decision.
 - Write the names of compound A and B.
 - Consumption of methylated ethanol by person can cause blindness and even death. How is methanol poisoning treated ?
 - Mention values associated with the above decision.
- Q. 2.** Recently Delhi Police launched a special drive to curb the crimes and accidents related to 'Drunken Driving'. An instrument known as alcometer is used to test whether a driver has consumed alcohol or not beyond a certain limit.
- Write the name and chemical formula of the compound used in alcometer.
 - Write the chemistry involved in above test.
 - Write the ionic equation involved in the chemistry of the test.
 - Mention the value shown by Delhi Police.

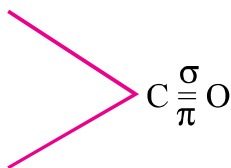
UNIT 12

ALDEHYDES, KETONES AND CARBOXYLIC ACIDS

Points to Remember

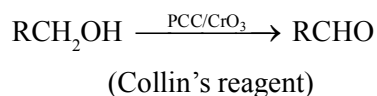
1. Aldehydes, ketones, carboxylic acids and their derivatives are commonly called as carbonyl compounds.
2. In Rosemund's reduction, poisoning of Pd with BaSO_4 prevent reduction of $\text{R}-\text{CHO}$ to $\text{R}-\text{CH}_2\text{OH}$.
3. In the reaction of toluene with CrO_3 , acetic anhydride is used to protect benzaldehyde by forming benzylidenediacetate to avoid its oxidation to benzoic acid.
4. Order of reactivity of aldehydes and ketones towards nucleophilic addition is :
 - (i) $\text{HCHO} > \text{CH}_3\text{CHO} > \text{CH}_3\text{CH}_2\text{CHO}$.
 - (ii) $\text{HCHO} > \text{RCHO} > \text{R CO R}$.
 - (iii) $\text{ArCHO} > \text{Ar COR} > \text{Ar CO Ar}$.
5. Benzaldehyde does not reduce Fehling's reagent.
6. Aldehydes and ketones with atleast one α -H atom get condensed in presence of a base. This is known as Aldol condensation.
7. Aldol condensation involves carbanion as intermediate.
8. Aldehydes with no α -H atoms under Cannizzaro's reaction.
9. Ketones react with dihydric alcohols to form cyclic ketals.
10. Monocarboxylic acids having (C_{12} - C_{18}) carbon atoms, are called fatty acids.
11. Boiling points of carboxylic acids is greater than corresponding alcohols.
12. Presence of EWGs enhances the acidic character of carboxylic acids.
13. $-\text{COOH}$ group is *m*-directing in electrophilic substitution reactions.
14. Compounds containing $-\text{CHO}$ group are named as carbaldehydes if $-\text{CHO}$ groups are three or more.
15. Isomerism : Chain, position and functional.

16. Structure of $-\text{CHO}$ group sp^2 hybridised.



17. General Methods of Preparation :

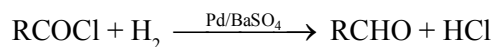
(i) Controlled oxidation of 1° alcohols :



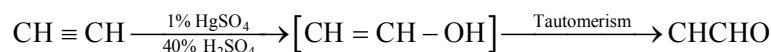
(ii) Dehydration of 1° alcohols :



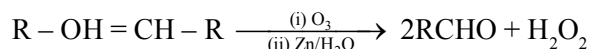
(iii) From Rosemund reaction/reduction :



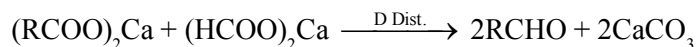
(iv) Hydration of alkynes :



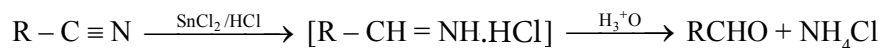
(v) Reductive ozonolysis of alkenes :



(vi) From salts of fatty acids :



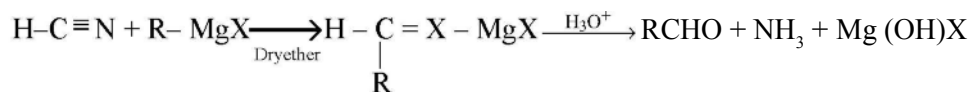
(vii) Stephen's reduction of nitrile compounds :



(viii) Hydrolysis of geminal halides :

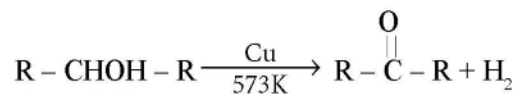


(ix) From Grignard's reagent :

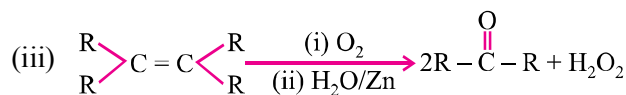
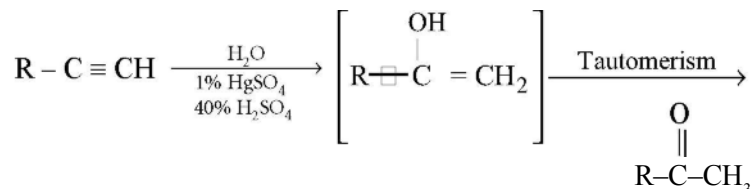


General Methods of Preparation of Ketones only

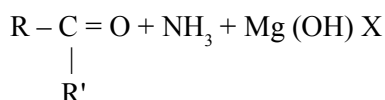
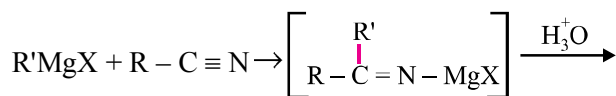
(i) Dehydrogenation of 2° alcohols :



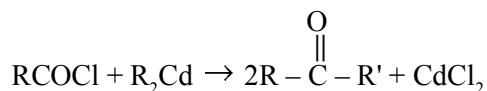
(ii) Hydration of alkynes :



(iv) From Grignard's reagents :



(iv) From acid chlorides :

**Physical Properties :**

HCHO is a gas at normal temperature. Formalin is 40% as solution of HCHO. Due to polarity they have high values of boiling point. Solubility in water is only for lower members.

Reactivity :

- (i) +I effect of alkyl groups decreases the +ve charge on carbonyl carbon.
 - (ii) Steric hindrance : Bulky group hinder approach of nucleophile.
 - (iii) α -hydrogen atom is acidic due to resonance.
18. Vinegar is 8 to 10% solution of CH_3COOH .
 19. α -hydrogen atoms in carboxylic acid are acidic in nature and can be easily replaced by halogen atoms in HVZ reaction.

21. Relative acid strength of $\text{RCOOH} > \text{HOH} > \text{ROH} > \text{HC} \equiv \text{CH} > \text{NH}_3$. It is because a strong acid has weak conjugate base.
22. Some dicarboxylic acids bearing general formula $\text{HOOC} - (\text{CH}_2)_n - \text{COOH}$ where $n = 0, 1, 2, \dots$ etc.
- $\text{HOOC} - \text{COOH}$ Oxalic acid 1, 2 ethanedioic acid
 $\text{HOOC} - \text{CH}_2 - \text{COOH}$ Malonic acid 1, 3 propanedioic acid
 $\text{HOOC} - (\text{CH}_2)_2 - \text{COOH}$ Succinic acid 1, 4 butanedioic acid
 $\text{HOOC} - (\text{CH}_2)_3 - \text{COOH}$ Glutonic acid 1, 5 pentanedioic acid
 $\text{HOOC} - (\text{CH}_2)_4 - \text{COOH}$ Adipic acid 1, 6 hexanedioic acid
23. Melting points : Higher : Even carbon atoms than next lower or higher homologues containing even number of carbon atoms due to symmetry and closer packing of molecules in the crystal lattice.

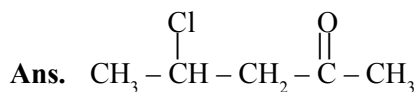
VERY SHORT ANSWER TYPE QUESTIONS (1 Mark)

Q. 1. Arrange the following compounds in increasing order of their acid strengths :



Ans. $(\text{CH}_3)_2\text{CHCOOH} < \text{CH}_3\text{CH}(\text{Br})\text{CH}_2\text{COOH} < \text{CH}_3\text{CH}_2\text{CH}(\text{Br})\text{COOH}$

Q. 2. Draw the structure of the compound whose IUPAC name is 4-chloropentan-2-one.



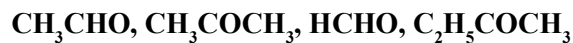
Q. 3. Which type of aldehyde can go Cannizzaro reaction ?

Ans. Aromatic and aliphatic aldehydes which do not contain α -hydrogen.

Q. 4. Name the aldehyde which does not give Fehling's solution test.

Ans. Benzaldehyde.

Q. 5. Arrange the following in order of their increasing reactivity towards HCN :

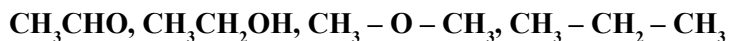


Ans. $\text{C}_2\text{H}_5\text{COCH}_3 < \text{CH}_3\text{COCH}_3 < \text{CH}_3\text{CHO} < \text{HCHO}$

Q. 6. Mention industrial product obtained from HCHO.

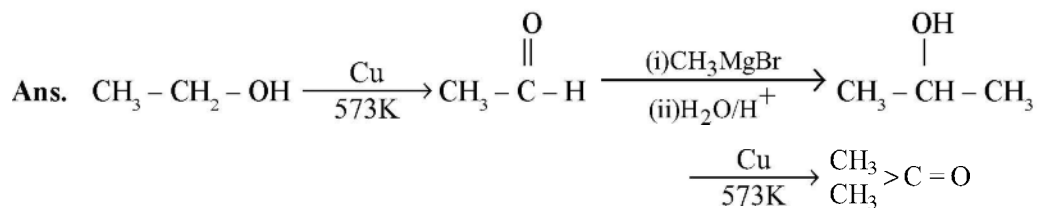
Ans. Bakelite

Q. 7. Arrange the following compounds in increasing order of their boiling point :



Ans. $\text{CH}_3 - \text{CH}_2 - \text{CH}_3 < \text{CH}_3 - \text{O} - \text{CH}_3 < \text{CH}_3\text{CHO} < \text{CH}_3\text{CH}_2\text{OH}$

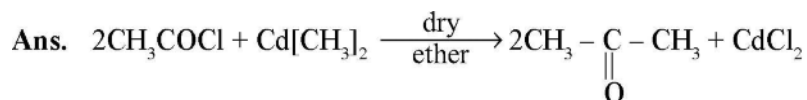
Q. 8. How is acetone obtained from ethanol ?



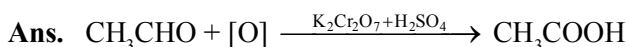
Q. 9. Why do aldehydes and ketones have lower boiling point than alcohols ?

Ans. Due to presence of associated molecules with H-bonding in alcohols.

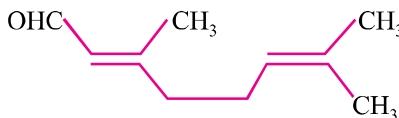
Q. 10. Write reaction between acetyl chloride and dimethyl cadmium.



Q. 11. What happens when CH_3CHO is treated with $\text{K}_2\text{Cr}_2\text{O}_7$ in presence of H_2SO_4 ?

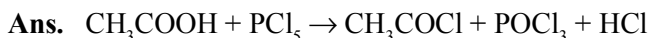


Q. 12. Write the IUPAC name of



Ans. 3, 7-Dimethylocta-2, 6 dien-1-al

Q. 13. Give balanced equation and name of products when CH_3COOH is treated with PCl_5 ?



Q. 14. Write the name of ester which gives the flavor of pineapple.

Ans. Ethyl butanoate.

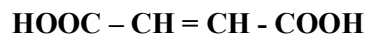
Q. 15. What product is obtained when ethyl benzene is oxidized with alkaline KMnO_4 ?

Ans. Benzoic acid ($\text{C}_6\text{H}_5\text{COOH}$) is obtained.

Q. 16. What is RDX ?

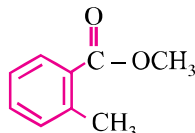
Ans. RDX is Research and Development Explosive which is prepared by the nitration of hexamethylene under controlled conditions.

Q. 17. Write IUPAC names of the following compound :



Ans. But-2-ene-1, 4-dioic acid

Q. 18. Write the IUPAC name of



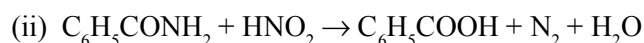
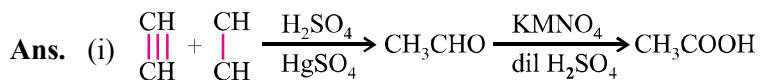
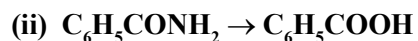
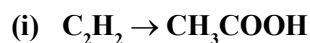
Ans. Methyl-2-methylbenzoate.

Q. 19. Why does benzoic acid not undergo Friedel-Craft reaction ?

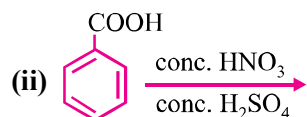
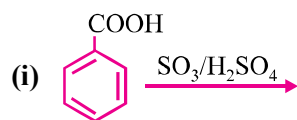
Ans. –COOH group in $\text{C}_6\text{H}_5\text{COOH}$ is an E. W. G. which deactivates the benzene ring. Hence electrophilic substitution becomes difficult.

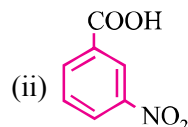
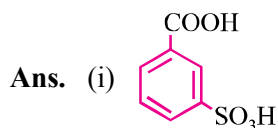
SHORT ANSWER-I TYPE QUESTIONS (2 Marks)

Q. 1. How will you convert :



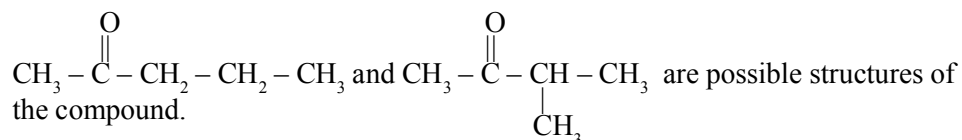
Q. 2. Complete the following :





Q. 3. An organic compound X has molecular formula $C_5H_{10}O$. It does not reduce Fehling's solution but forms a bisulphate compound. It also gives positive Iodoform test. What are possible structures of X? Explain your reasoning relating structure.

Ans. Ketone give +ve test with Iodoform. It is methyl-ketone.



Q. 4. Give the chemical test to distinguish between :

- (i) CH_3CHO and $CH_3 - \overset{O}{\parallel} C - CH_3$
 (ii) CH_3CHO and C_6H_5CHO

Ans. (i) CH_3CHO gives Tollen's reagent test.



Silver mirror

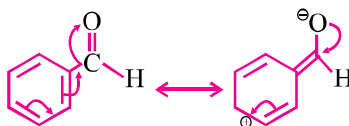
(ii) CH_3CHO gives brick red ppt.



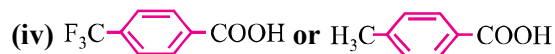
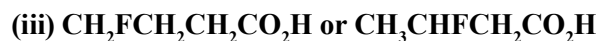
Brick red ppt.

Q. 5. Would you expect benzaldehyde to be more reactive or less reactive in nucleophilic addition reactions than propanal? Explain your answer.

Ans. Carbon atom of carbonyl in C_6H_5CHO is less reactive than that of propanal. C_6H_5CHO is less polar due to resonance.

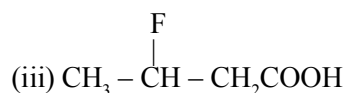


Q. 6. Which acid of each pair shown here would you expect to be stronger ?



Ans. (i) FCH_2COOH

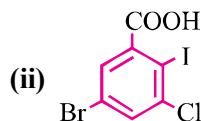
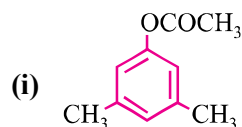
(ii) CH_2FCOOH



Q. 7. Carboxylic acids do not give reactions of aldehydes and ketones why ?

Ans. It is due to resonance $\text{R}-\overset{\text{O}}{\parallel}{\text{C}}-\ddot{\text{O}}\text{H} \longleftrightarrow \text{R}-\overset{\ominus}{\text{O}}=\overset{\oplus}{\text{C}}-\text{OH}$ Position of $> \text{C} = \text{O}$ group keep changing.

Q. 8. Write IUPAC name of the following :



Ans. (i) 3, 5 Dimethylphenylethanoate

(ii) 5 bromo 3-chloro-2-iodobenzoic acid

Q. 9. Account for the following :

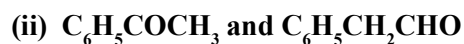
(i) Oxidation of toluene to $\text{C}_6\text{H}_5\text{CHO}$ with CrO_3 is carried out in presence of acetic anhydride.

(ii) Melting point of an acid with even number is higher than those of its neighbours with odd number of carbon atoms.

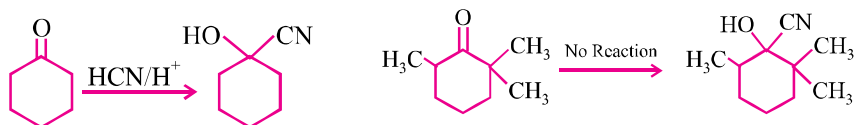
Ans. (i) It is used to prevent oxidation to benzoic acid.

(ii) Acids with even number of carbon atoms fit into crystal lattice.

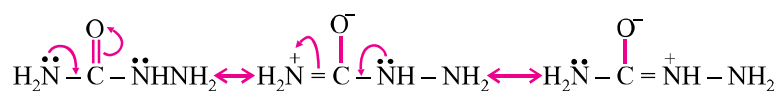
Q. 10. Distinguish between :



Ans. (i) Due to steric hindrance for CN^- at $\text{C} = \text{O}$ and not of 3-methyl groups at α -position but in case of



(ii) Only one $-\text{NH}_2$ group attached to $\text{C} = \text{O}$ is involved in resonance. As a result electron density on this NH_2 group decreases and hence does not act as a nucleophile.



Q. 15. Aldehydes are easily oxidisable yet propanal can conveniently be prepared by the oxidation of propanol by acidic $\text{K}_2\text{Cr}_2\text{O}_7$.

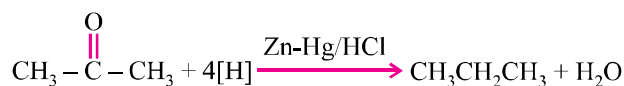
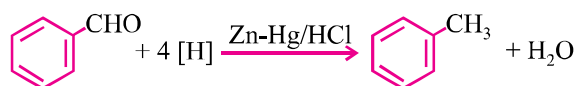
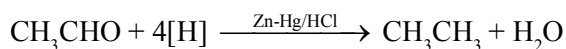
Ans. Aldehydes having boiling points less than 373 K can be removed by distillation therefore propanal 323 can easily be prepared from propanol-1 by distillation from the alcohol acid dichromate solution.

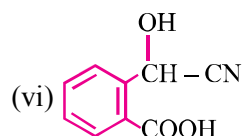
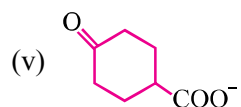
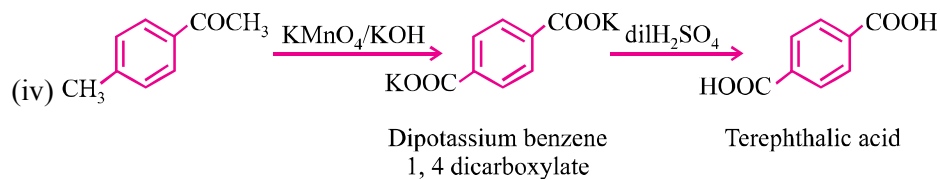
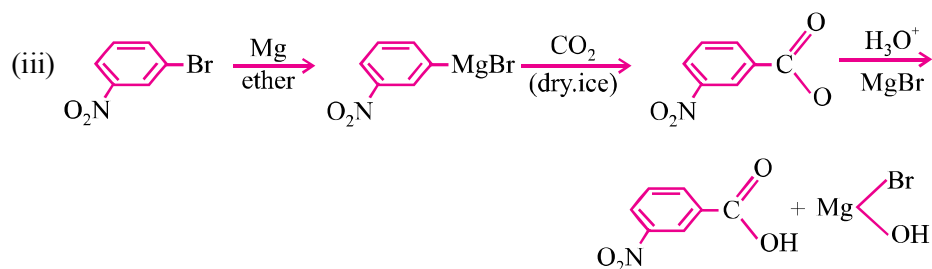
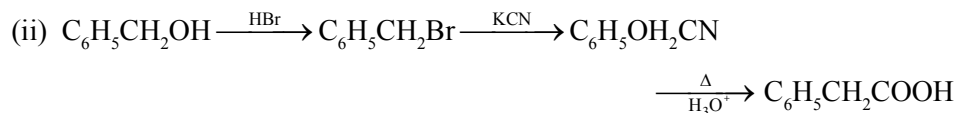
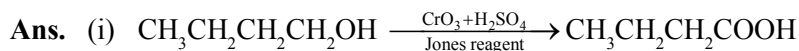
SHORT ANSWER-II TYPE QUESTIONS (3 Marks)

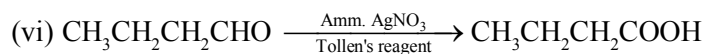
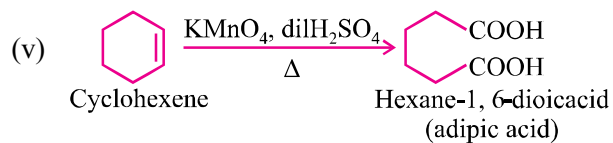
Q. 1. Illustrate the following name reactions :

- (i) Clemmensen's Reduction
- (ii) Beckmann Rearrangement
- (iii) Benzoin Condensation

Ans. (i) Both aldehydes and ketones are reduced to hydrocarbons.



**Q. 3. Write chemical reaction to affect the following transformations :****(i) Butan-1-ol \rightarrow Butanoic acid****(ii) Benzyl alcohol to phenylethanoic acid****(iii) 3-Nitrobromobenzene to 3-nitrobenzoic acid****(iv) 4-methylacetophenone to Terephthalic acid****(v) Cyclohexene \rightarrow Hexane-1, 6 dioic acid****(vi) Butanal \rightarrow Butanoic acid**



Q. 4. Draw the structure of the following derivatives :

(i) 2, 4-dinitrophenylhydrazone of $\text{C}_6\text{H}_5\text{CHO}$

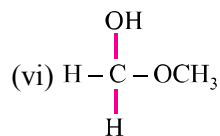
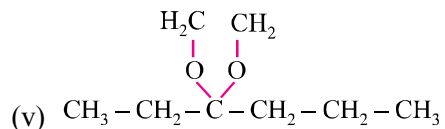
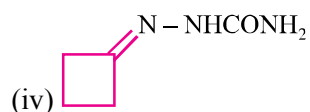
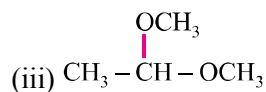
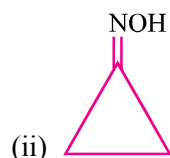
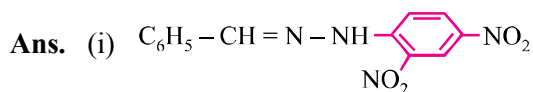
(ii) Cyclopropanone oxime

(iii) Acetaldehydedimethylacetal

(iv) Semicarbazone to cyclobutanone

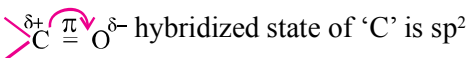
(v) Ethylene ketal of hexan-3-one

(vi) Methylhemiacetal of formaldehyde

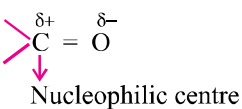


Q. 5. Draw the structure of a carbonyl group and indicate :

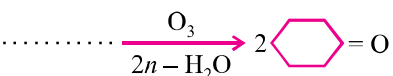
- (i) hybridized state of carbon
- (ii) the σ and π bonds
- (iii) the electrophilic and nucleophilic centres

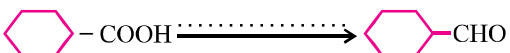
Ans. (i)  hybridized state of 'C' is sp^2

(ii) 


(iii) 
Nucleophilic centre

Q. 6. Complete the following as missing starting material, reagent or products :

(i) 

(ii) 

(iii) 

Ans. (i)  (Ozonolysis)
1, 2 Dicyclohexylethene

(ii) $B_2H_6/THF, PCC$ (Hydroboration)

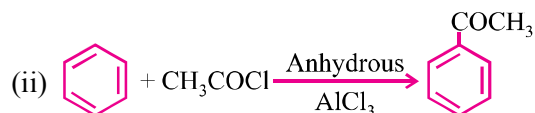
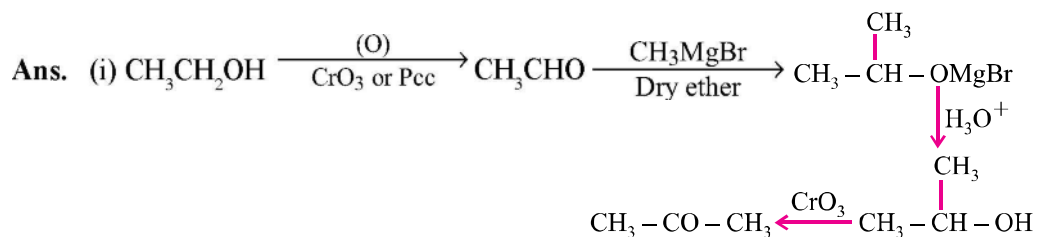
(iii)  (Oxidation)
Potassium benzoate

Q. 7. How can the following converted :

(i) Ethanol \rightarrow Acetone

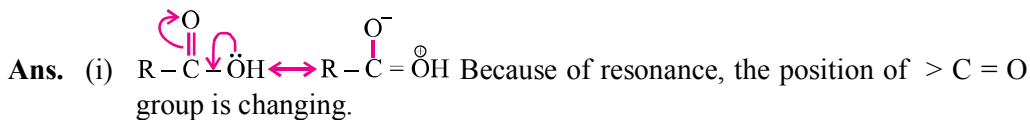
(ii) Benzene \rightarrow Acetophenone

(iii) Benzoic acid \rightarrow Benzaldehyde

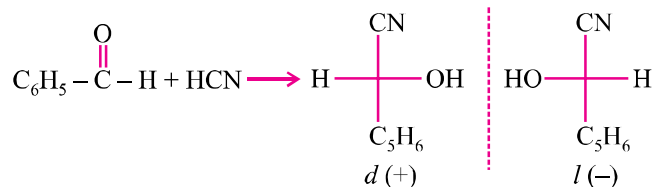


Q. 8. Give reasons for the following :

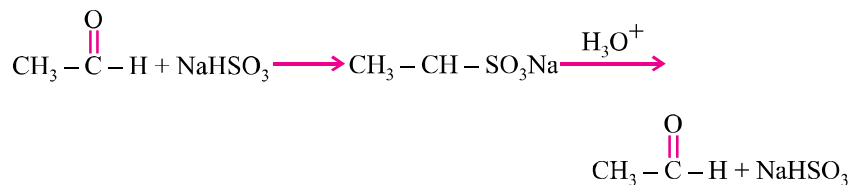
- Carboxylic acids do not give characteristic reactions of carbonyl group.
- Treatment of $\text{C}_6\text{H}_5\text{CHO}$ with HCN gives a mixture of two isomers which cannot be separated even by fractional distillation.
- Sodium bisulphate is used for purification of ketones and aldehydes.



(ii) Due to two optical isomers fractional distillation is not possible.



(iii) Due to formation of additional compound with NaHCO_3 whereas impurities do not.



Q. 9. Write tests to distinguish between :

- CH_3CHO and $\text{C}_6\text{H}_5\text{CHO}$
- $\text{C}_6\text{H}_5-\text{OH}$ and CH_3COOH
- Pentanal and Pentan-2-one

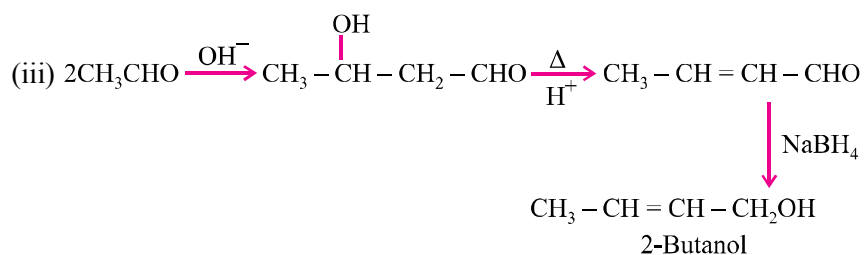
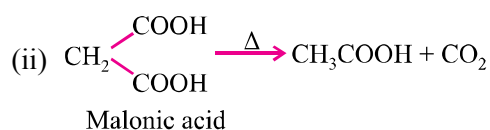
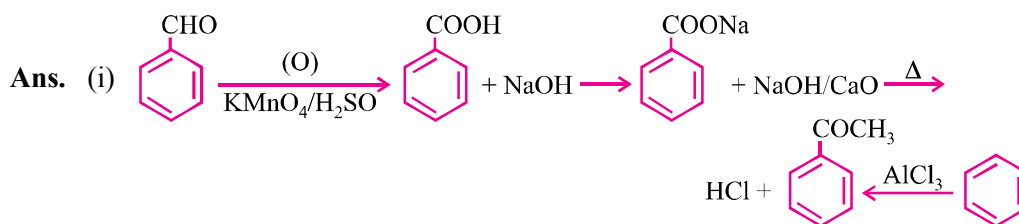
- Ans.** (i) CH_3CHO gives brick red ppt. with Fehling, $\text{C}_6\text{H}_5\text{CHO}$ not.
 (ii) Phenol does not give brisk effervescence but CH_3COOH gives this test with NaHCO_3 .
 (iii) Pentanal forms silver mirror but pentan-2-one does not.

Q. 10. Convert :

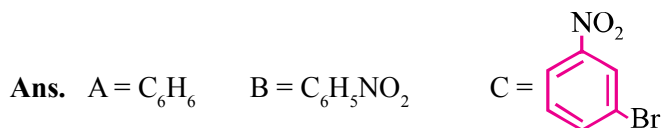
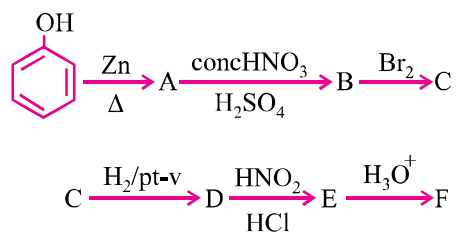
(i) Benzaldehyde to acetophenone

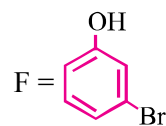
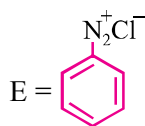
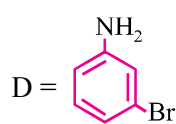
(ii) Malonic acid to acetic acid

(iii) Acetaldehyde to 2-butanol

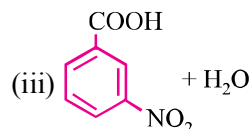
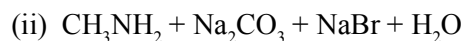
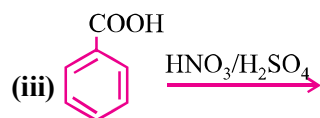
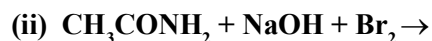


Q. 11. Write the structures of organic compound A to F in the following sequence of reactions :





Q. 12. Complete the following :



LONG ANSWER TYPE QUESTIONS (5 Marks)

Q. 1. Which of the following compounds would undergo Aldol condensation, which the Cannizzaro reaction and which neither ? Write the structures of the expected products of aldol condensation and Cannizzaro reaction :

(i) Methanal

(ii) 2-Methylpentanal

(iii) Benzaldehyde

(iv) Benzophenone

(v) Cyclohexanone

(vi) 1-Phenylpropanone

(vii) Phenylacetaldehyde

(viii) Butan-1-ol

(ix) 2, 2 Dimethylbutanal

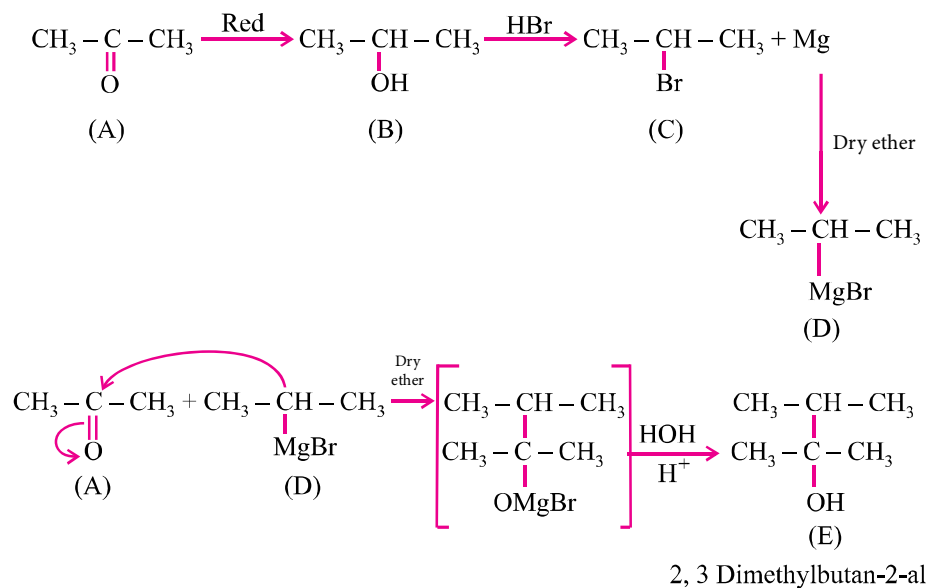
Ans. (i), (iii) and (ix) will give Cannizzaro reaction due to absence of α -hydrogen.

(ii), (v), (vi) and (vii) will give aldol condensation due to presence of α -hydrogen.

(iv) and (viii) will neither undergo Cannizzaro's reaction nor Aldol condensation because benzophenone does not give α -hydrogen and butanol is alcohol, not aldehyde which cannot undergo aldol condensation.

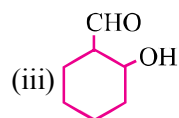
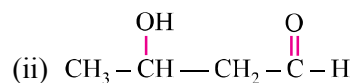
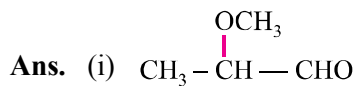
Q. 2. An organic compound 'A' (C_3H_6O) is resistant to oxidation but forms compound 'B' (C_3H_8O). On reduction 'B' reacts with HBr to form the compound 'C'. 'C' with Mg forms Grignard's reagent 'D' which reacts with 'A' to form a product which on hydrolysis gives 'E'. Identify 'A' to 'E'.

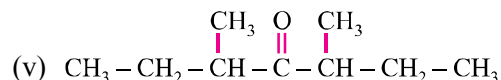
Ans. 'A' must be ketone.



Q. 3. Give structure of the following compounds :

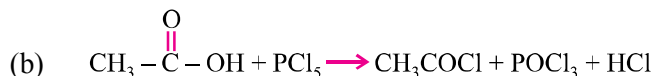
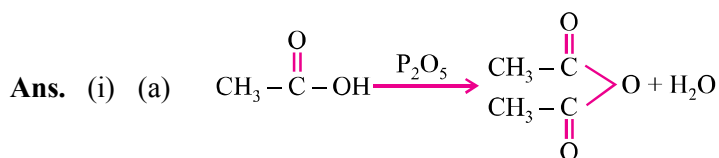
- (i) 2-methoxypropionaldehyde
- (ii) 3-hydroxy butanal
- (iii) 2-hydroxy cyclopentanecarbaldehyde
- (iv) 4-oxopentanal
- (v) Di-secbutyl ketone





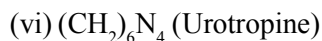
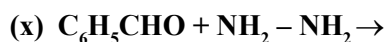
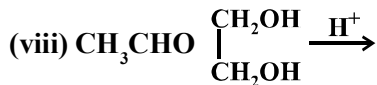
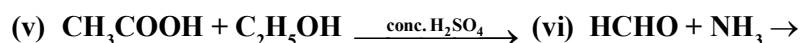
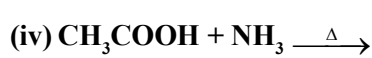
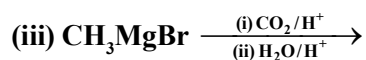
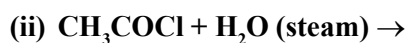
Q. 4. (i) How will you prepare (a) acetic anhydride and (b) acetyl chloride from CH_3COOH ? Write the equation involved in each case.

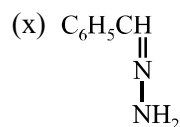
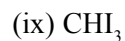
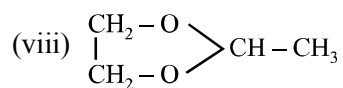
(ii) Why is the boiling point of acid anhydride higher than the acid from which it is obtained ?



(ii) Acid anhydride bigger size than corresponding acids and stronger van der Waal's forces of attraction than their corresponding acids.

Q. 5. Complete the following reactions and write main products :





Q. 6. Give reasons for the following :

- (i) $\text{C}_6\text{H}_5\text{COOH}$ is weaker than formic acid.
- (ii) HCOOH and CH_3COOH differentiated by Tollen's reagent.
- (iii) $\text{R}-\text{COOH}$ do not give characteristic reaction with $>\text{C}=\text{O}$.
- (iv) Carboxylic acids are stronger acids than phenols.
- (v) Acid amides are weakly basic in nature.

- Ans.**
- (i) Due to disabilities of carboxylate anion due to conjugation.
 - (ii) HCOOH acid is a stronger acid than CH_3COOH .
 - (iii) $>\text{C}=\text{O}$ group is sterically hindered in carboxylic acid.
 - (iv) Dispersal of $-ve$ charge on carboxylate ions than phenate ion.
 - (v) Acid amides are basic due to lone pair of electrons on nitrogen atom.

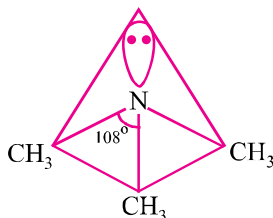
UNIT 13

AMINES

Points to Remember

1. Amines are alkyl and/or aryl derivatives of $\ddot{\text{N}}\text{H}_3$.
2. Functional groups of 1°, 2° and 3° amines are respectively as given below :
$$-\ddot{\text{N}}\text{H}_2, -\ddot{\text{N}}\text{H}- \text{ and } -\ddot{\text{N}}-$$
3. Gabriel phthalimide synthesis can't be used for the preparation of 2° and 3° amines. It gives aliphatic primary amine only.
4. Hoffmann's bromamide reaction gives 1° amines having one carbon atom less than parent primary amide.
5. The order of basic strength of aliphatic amines is :
 - (i) Aliphatic amines are more basic than $\ddot{\text{N}}\text{H}_3$.
 - (ii) In aqueous solution medium, the order is 2° > 1° > 3° (for $-\text{CH}_3$ group) and 2° > 3° > 1° for $-\text{C}_2\text{H}_5$ group.
 - (iii) In non-aqueous medium or gaseous phase, the order is 3° > 2° > 1°.
6. Basic strength of aromatic amines :
 - (i) Aromatic amines are weaker bases than $\ddot{\text{N}}\text{H}_3$.
 - (ii) ERGs like $-\text{CH}_3$, $-\text{OR}$, $-\text{NH}_2$ etc. increase basic strength while EWGs like $-\text{NO}_2$, $-\text{CN}$ etc. decrease the basic strength. The effect of substituents is more at para positions and less at meta position.
7. Basic strength of amines is expressed in terms of K_b or $\text{p}K_b$.
8. 1°, 2° and 3° amines can be distinguished by Hinsberg's test.
9. Hinsberg's reagent is benzenesulphonyl chloride ($\text{C}_6\text{H}_5\text{SO}_2\text{Cl}$).
10. 3° amines like trimethylamine are used as insect attractants.
11. Diazonium salts are represented by the general formula $[\text{Ar N} \equiv \text{N}]^+ \text{X}^-$.

12. **Structure of amines :** Pyramidal for trimethyl amine $(\text{CH}_3)_3 \ddot{\text{N}}$. They are Lewis bases.



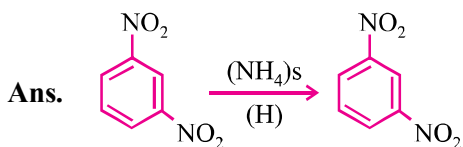
13. Aliphatic amines are known as amino alkanes.
14. Aliphatic amines are more basic than NH_3 .
i.e., $\text{CH}_3\text{NH}_2 > \text{NH}_3$
15. Aniline is less basic than NH_3 (*i.e.*, $\text{C}_6\text{H}_5\text{NH}_2 < \text{NH}_3$).
16. Carbylamine test only given by 1° amines.
17. Manich reaction involves the reaction of ketones with HCHO and NH_3 (or amine) in acidic medium to form Manich bases.
18. 1° amines give effervescence with HNO_2 .
19. $-\text{NH}_2$ group in aniline is *o*- and *p*- directing and is highly activating in nature.
20. Acylation of aniline is done before subjecting it to nitration or halogenation.
21. Aliphatic diazonium salts are very unstable and do not exist while aromatic salts are relatively stable.
22. These salts are prepared from 1° aryl amines by diazotization reactions.
23. Diazotised salts (diazonium salts) are used to prepare a variety of aromatic compounds.
24. $\text{R} - \text{C} \equiv \text{N}$ have generally pleasant odours but alkyl isocyanides have highly unpleasant odours.
25. Alkyl isocyanides have lower boiling points than that of isomeric alkyl cyanides due to lower dipole moments.
26. Arenediazonium salts are highly reactive compounds and reactivity is due to excellent leaving ability of diazo group as N_2 gas.

VERY SHORT ANSWER TYPE QUESTIONS (1 Mark)

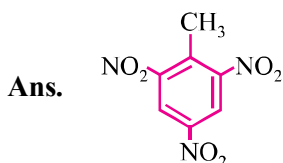
Q. 1. Write IUPAC name of CH_3NC .

Ans. Methane carbylamine.

Q. 2. Convert m-dinitrobenzene to m-nitro aniline.



Q. 3. Draw structure of TNT, an explosive.



Q. 4. Write IUPAC name of $\text{CH}_3 - \text{N} - \text{C} - \text{CH}_2 - \text{CH}_3$

Ans. 3-N-Methyl-N,N-dimethyl pentanamine

Q. 5. Give one use of quaternary ammonium salts.

Ans. It is used as detergents, e.g., $[\text{CH}_3(\text{CH}_2)_{15}\text{N}(\text{CH}_3)_2]^+\text{Cl}^-$.

Q. 6. What is Hinsberg's reagent ?

Ans. Benzene sulphonyl chloride,

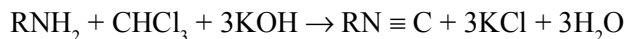
Q. 7. Why aniline dissolves in HCl ?

Ans. $\text{C}_6\text{H}_5\text{NH}_2 + \text{HCl} \rightarrow [\text{C}_6\text{H}_5\text{NH}_3]^+\text{Cl}^-$.

It dissolves due to its basic nature.

Q. 8. How will you test the presence of primary amine ?

Ans. By carbyl amine test.



Q. 9. What is vapour phase nitration ?

Ans. $\text{CH}_4 + \text{HNO}_3 \xrightarrow{623 \text{ K}} \text{CH}_3\text{NO}_2$
 (High temperature and nitration in vapour phase only)

Q. 10. Write one use of dopamine and atropine alkaloid.

Ans. Dopamine : Neurotransmitter

Atropine alkaloid : 0.5-1.0% solution ophthalmic examination.

Q. 11. Direct nitration of aniline is not carried out. Explain.

Ans. ($\text{H}_2\text{SO}_4 + \text{HNO}_3$) easily oxidized aniline into tarry complex product due to high e^- density on the benzene ring of aniline.

Q. 12. Among the compounds as following which will react with $\text{CH}_3-\overset{\text{O}}{\parallel}{\text{C}}-\text{CH}_3$ to give product containing $> \text{C} = \text{N} -$?

(i) $\text{C}_6\text{H}_5\text{NH}_2$

(ii) $(\text{CH}_3)_3\text{N}$

(iii) $\text{C}_6\text{H}_5\text{NHC}_6\text{H}_5$

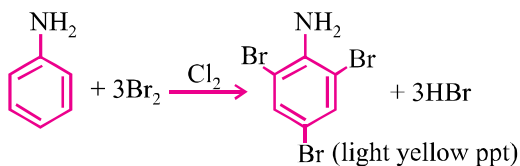
(iv) $\text{C}_6\text{H}_5\text{NHNH}_2$

Ans. $\text{C}_6\text{H}_5\text{NH}_2$ and $\text{C}_6\text{H}_5\text{NHNH}_2$.

Q. 13. How will you give expression for K_b to indicate its basic strength ?

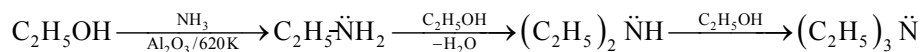
Ans.
$$K_b = \frac{[\text{RNH}_3^+][\text{OH}^-]}{[\text{R}-\text{NH}_2]}$$

Q. 14. What happens when aniline is treated with bromine ?

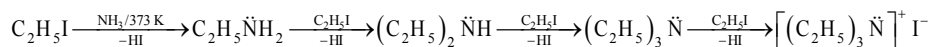
Ans. 

Q. 15. Write a chemical equation to illustrate the ammonolysis.

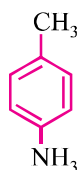
Ans. For alcohols :



For alkyl halides :



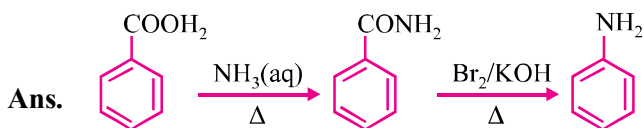
Q. 16. Write the structure of p-toluene.

Ans. 

Q. 17. Prepare/convert nitrobenzene into aniline.



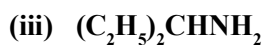
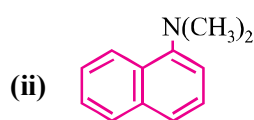
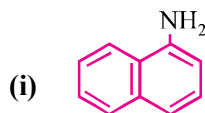
Q. 18. Convert C_6H_5COOH to $C_6H_5NH_2$.



Q. 19. Write isomerism exhibited by different amines.

Ans. Chain, position, metamerism, functional.

Q. 20. Classify the following as 1° , 2° and 3° amines :



Ans. (i) 1°

(ii) 3°

(iii) 1°

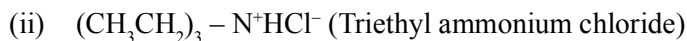
(iv) 2°

SHORT ANSWER TYPE QUESTIONS (2 Marks)

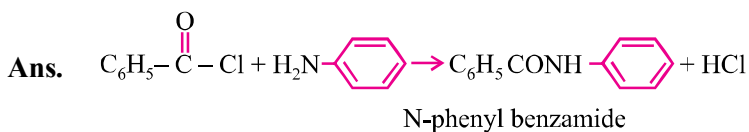
Q. 1. Complete the following acid-base reactions and name the products :



Ans. (i) $CH_3CH_2CH_2N^+H_3Cl^-$ (n-propyl ammonium chloride)



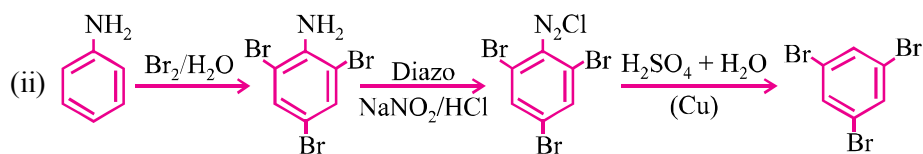
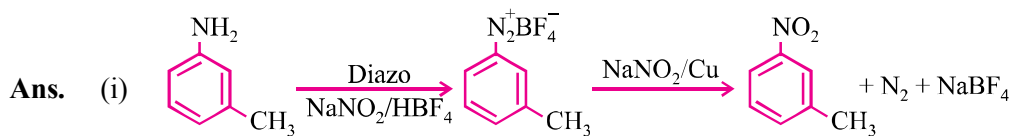
Q. 2. Write chemical reaction of $C_6H_5NH_2 + C_6H_5COCl$ and name product obtained.



Q. 3. How will you convert :

(i) **3-methylaniline** → **3-nitrotoluene**

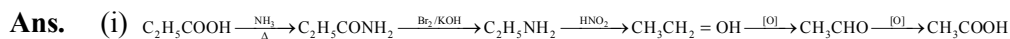
(ii) **Aniline** → **1, 3, 5-tribromobenzene**



Q. 4. How will you convert :

(i) **Propanoic acid** → **Ethanoic acid**

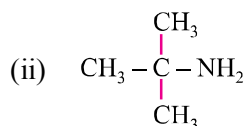
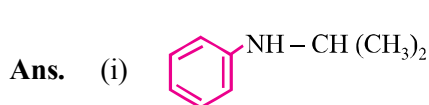
(ii) **Nitromethane** → **Dimethylamine**



Q. 5. Draw the structures of the following compounds :

(i) **N-isopropylaniline**

(ii) **t-butylamine**



Q. 6. Why $C_6H_5N^+(CH_3)_3OH^-$ a stronger base than NH_4OH ?

Ans. Due to EW – I effect of phenyl group, it decreases e^- density on nitrogen atom but no such group in NH_4OH .

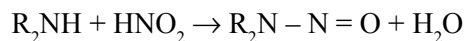
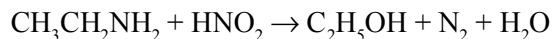
Q. 7. Explain Kb order : $Et_2NH > Et_3N > EtNH_2$ in aqueous solution.

Ans. Basicity of amines in aqueous solution depends upon :

- + I effect of an alkyl group.
- Extend of hydrogen bonding with H_2O .
- Steric effects of alkyl groups.

Q. 8. Distinguish between 1°, 2° and 3° amines by HNO₂ acid test.

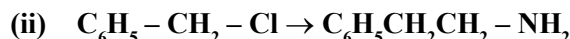
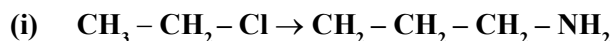
Ans. 1° gives N₂ gas. 2° gives yellow oily compound. 3° form water soluble salts.



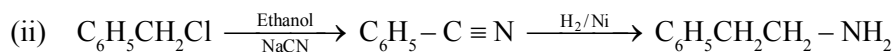
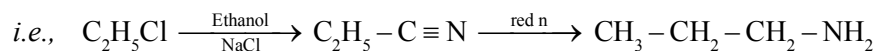
Q. 9. A compound 'A' having molecular formula C₃H₇ON reacts with Br₂ in presence of NaOH to give compound 'B'. This compound 'B' reacts with HNO₂ to form alcohol and N₂ gas. Identify compound 'A' and 'B' and write the reaction involved.

Ans. 'A' is CH₃CH₂CONH₂ $\xrightarrow[\text{NaOH}]{\text{Br}_2}$ CH₃CH₂NH₂ $\xrightarrow{\text{HNO}_2}$ C₂H₅OH + N₂ + H₂
(B)

Q. 10. Write chemical equation for the following conversions :



Ans. (i) With NaCN and reduction.



Q. 11. Account for :

(i) **Amino group in aniline is *o*- and *p*- directing in aromatic electrophilic substitution reactions. Aniline on nitration gives a substantial amount of *m*-nitroaniline.**

(ii) **Aniline does not go Friedel Crafts reaction.**

Ans. (i) It is because aniline is formed by protonation with NH_3^\oplus *i.e.*, EWG hence it is *m*-directing *i.e.*, 47%.

(ii) It is because aniline is basic, can form adduct with AlCl₃, electrophile cannot be generated.

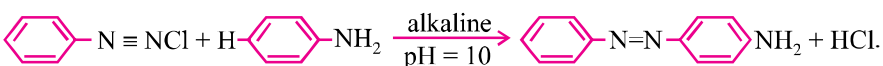
Q. 12. Account for the following :

- (i) Electrophilic substitution in aromatic amines takes place more readily than benzene.
- (ii) Nitro compounds have higher boiling points than hydrocarbons having almost same molecular mass.

Ans. (i) $-\text{NH}_2$ is ERG, electrophilic substitution takes place faster.
 (ii) Nitro compounds are more polar than hydrocarbons therefore have more van der Waal's forces of attraction.

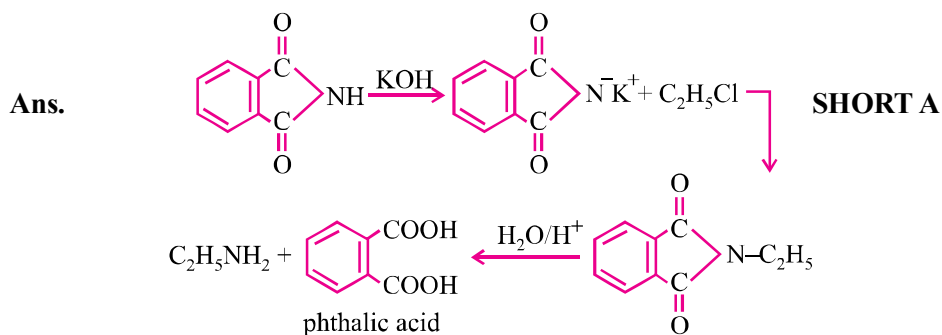
Q. 13. Write short notes on :

- (i) Coupling reaction
- (ii) Ammonolysis

Ans. (i) 

- (ii) Ammonolysis :
- $$\text{R} - \text{X} + \text{NH}_3 \rightarrow \text{R} - \text{NH}_2 + \text{HX}$$
- $$\text{RNH}_2 + \text{R} - \text{X} \rightarrow (\text{R})_2\text{N} + \text{HX}$$
- $$(\text{R})_2\text{NH} + \text{R} - \text{X} \rightarrow (\text{R})_3\text{N} + \text{HX}$$
- $$(\text{R})_3\text{N} + \text{R} - \text{X} \rightarrow [\text{R}_4\text{N}]^{\oplus}\text{X}^{-}$$

Q. 14. Prepare pure sample of 1° amine from 1° alkyl halide.



ANSWER-II TYPE QUESTIONS (3 Marks)

Q. 1. What happens when :

- (i) An alkyl halide reacts with AgNO_2 and product is reduced.
- (ii) An alkyl halide is treated with AgCN and product is hydrolysed.
- (iii) Methyl magnesium is treated with cyanogens chloride.

- Ans.** (i) $R - X + AgNO_2 \rightarrow R - NO_2 \rightarrow R - NH_2$
- (ii) $R - X + AgCN \rightarrow RNC \rightarrow RNH_2 + HCOOH$
- (iii) $CH_3MgBr + CN - Cl \rightarrow CH_3CN + MgCl$

Q. 2. How would you prepare :

- (i) $C_6H_5NH_2$ from $C_6H_5NO_2$
- (ii) CH_3NH_2 from $C_2H_5NH_2$
- (iii) $C_2H_5NH_2$ from CH_3NH_2

Ans. (i)

- (ii) $C_2H_5NH_2 \xrightarrow{CH_3COOH} CH_3COONH_4 \xrightarrow{CH_3CONH_2} CH_3NH_2$
- (iii) $CH_3NH_2 \xrightarrow{CH_3OH} CH_3Cl \xrightarrow{CH_3CN} CH_3CH_2NH_2$

Q. 3. Write the structure of the products in each case :

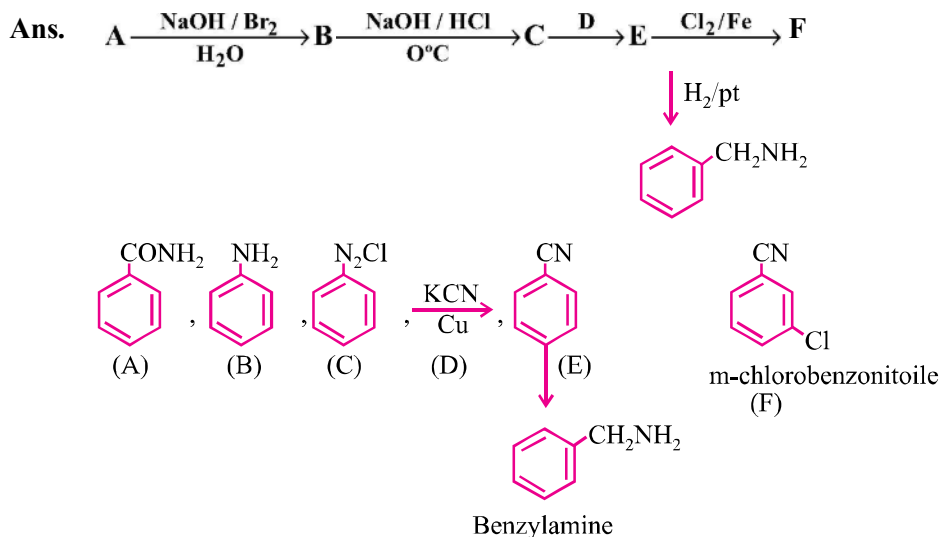
- (i) $CH_3CH_2NH_2$
- (ii) $CH_3CONHC_6H_5$
- (iii) CH_3CH_2CN

Ans. (i) $CH_3CH_2NHCOCH_3, CH_3COOH$

(ii)

(iii) $CH_3CH_2COOH + NH_4^+$

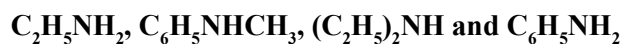
Q. 4. Write the structure of reagents/organic compounds 'A' to 'F':



LONG ANSWER TYPE QUESTIONS (5 Marks)

Q. 1. Arrange the following :

(i) In decreasing order of pK_b values :

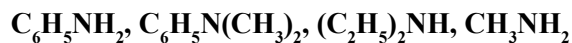


(ii) In increasing order of basic strength :

(a) Aniline, p-nitroaniline and p-toluidine



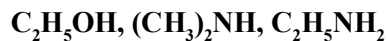
(iii) In decreasing order of basic strength :



(iv) Decreasing order of basic strength in gas phase :



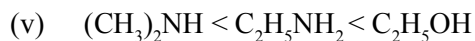
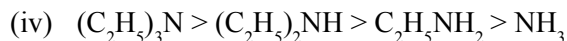
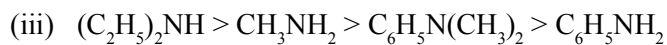
(v) Increasing order of boiling point :



Ans. (i) $\text{C}_2\text{H}_5\text{NH}_2 > \text{C}_6\text{H}_5\text{NHCH}_3 > \text{C}_6\text{H}_5\text{NH}_2 > (\text{C}_2\text{H}_5)_2\text{NH}$

(ii) (a) p-nitroaniline < aniline < p-toluidine





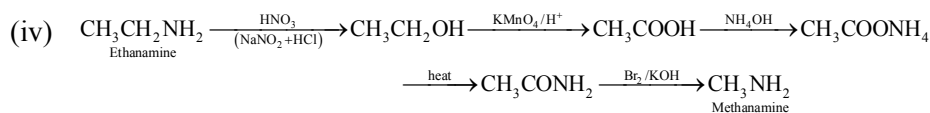
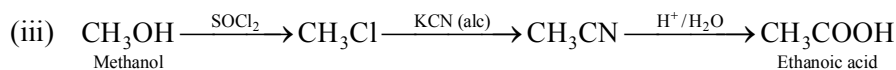
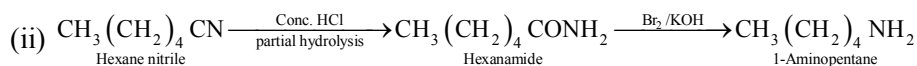
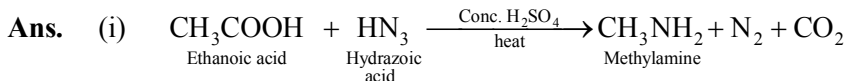
Q. 2. How will you convert :

(i) Ethanoic acid into methanamine

(ii) Hexane nitrile into 1-aminopentane

(iii) Methanol into ethanoic acid

(iv) Ethanamine into methanamine



Q. 3. Write short note on the following :

(i) Carbylamine reaction

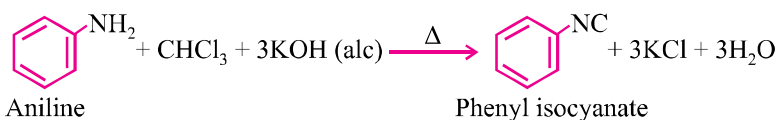
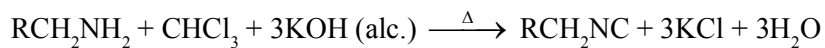
(ii) Diazotization

(iii) Hoffmann's bromide reaction

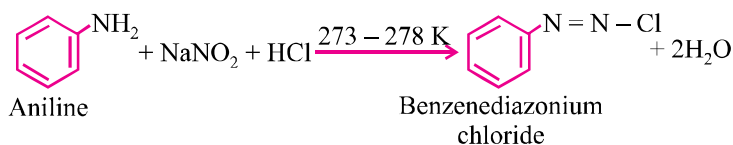
(iv) Coupling reaction

(v) Ammonolysis

Ans. (i) **Carbylamine reaction :** When primary amine (aromatic or aliphatic) warmed with chloroform and alc. KOH, isocyanides are formed which can be identified by their offensive smell. This test is used to identify the presence of primary amine or chloroform.

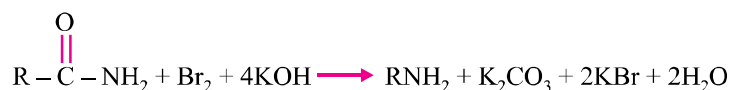


- (b) **Diazotization** : When primary aromatic amine is treated with $NaNO_2$ and HCl at 273-278 K, diazonium salt is obtained. This reaction is known as diazotization.



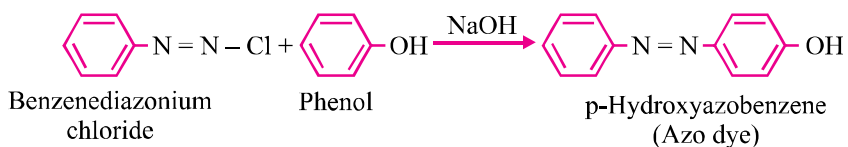
Benzenediazonium chloride is a very important synthetic compound, which can be changed into haloarenes, phenol, cyanobenzene, benzene etc.

- (c) **Hoffmann's bromide reaction** : When any primary amide (aliphatic or aromatic) is treated with bromine and alkali, it gives the amine of one carbon atom less.

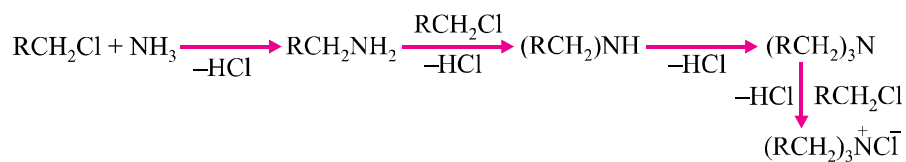


This reaction is used to reduce one carbon atom from a compound.

- (d) **Coupling reaction** : When benzenediazonium chloride is treated with phenols or aromatic amines, azo dyes are produced in which diazo ($-N=N-$) group is retained. Coupling reactions generally take place at p-position of phenol or aromatic amines.

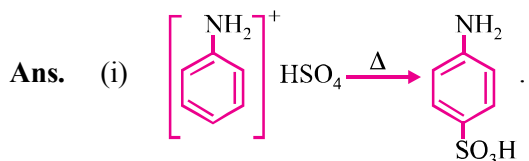


- (e) **Ammonolysis** : Reaction of alkyl halides with ammonia is known as ammonolysis. Ammonolysis generally gives the mixture of 1°, 2°, 3° amines and quaternary ammonium salt.



Q. 4. Complete the following reactions :

- (i) $C_6H_5NH_2 + H_2SO_4$ (conc.) \rightarrow
 (ii) $C_6H_5N_2Cl + C_2H_5OH \rightarrow$
 (iii) $C_6H_5NH_2 + (CH_3CO)_2O \rightarrow$
 (iv) $C_6H_5N_2Cl + H_3PO_2 + H_2O \rightarrow$
 (v) $C_6H_5NH_2 + CHCl_3 + 3KOH$ (alc.) \rightarrow



- (ii) $C_6H_6 + N_2 + HCl + CH_3CHO$
 (iii) $C_6H_5NHCOCH_3 + CH_3COOH$
 (iv) $C_6H_6 + H_3PO_3 + HCl + N_2$
 (v) $C_6H_5NC + 3KCl + 3H_2O$

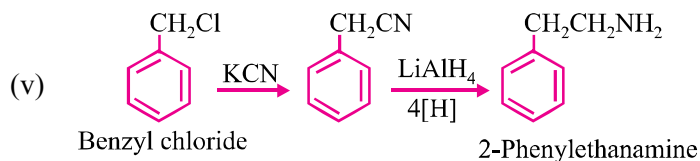
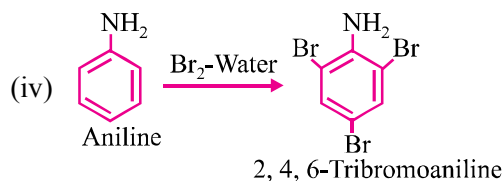
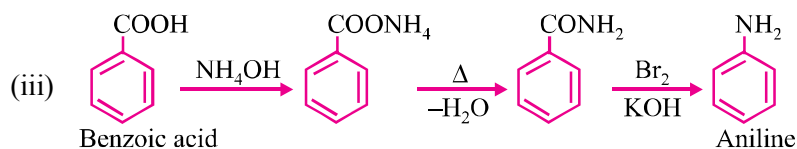
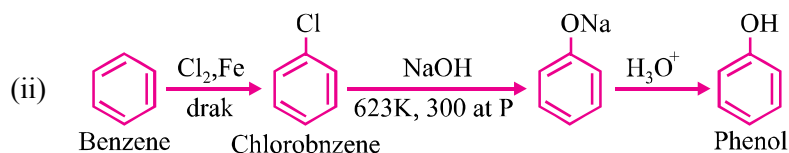
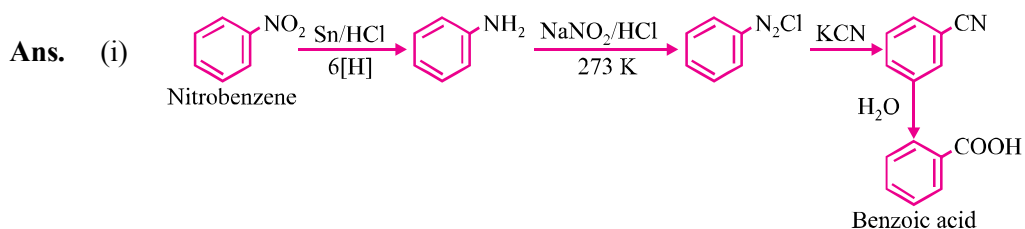
Q. 5. Write A, B and C in the given reactions :

- (i) $C_6H_5N_2Cl \xrightarrow{CuCN} A \xrightarrow{H_2O/H^+} B \xrightarrow{NH_3} C$
 (ii) $CH_3CH_2Br \xrightarrow{KCN} A \xrightarrow{LiAlH_4} B \xrightarrow[0^\circ C]{HNO_2} C$
 (iii) $C_6H_5NO_2 \xrightarrow{Fe/HCl} A \xrightarrow[273 K]{HNO_2} B \xrightarrow[2\Delta]{H_2O/H^+} C$
 (iv) $CH_3COOH \xrightarrow[\Delta]{NH_3} A \xrightarrow{NaOBr} B \xrightarrow{NaNO_2/HCl} C$
 (v) $CH_3CH_2I \xrightarrow{NaCN} A \xrightarrow[\text{partial hydrolysis}]{OH^-} B \xrightarrow{NaOH/Br_2} C$

- Ans.** (i) $C_6H_5CN, C_6H_5COOH, C_6H_5CONH_2$
 (ii) $CH_3CH_2CN, CH_3CH_2NH_2, CH_3CH_2OH$
 (iii) $C_6H_5NH_2, C_6H_5N_2Cl, C_6H_5OH$
 (iv) $CH_3CONH_2, CH_3NH_2, CH_3NH_3^+Cl^-$
 (v) $CH_3CH_2CN, CH_3CH_2CONH_2, CH_3CH_2NH_2$

Q. 6. Accomplish the following conversions :

- (i) $C_6H_5NO_2 \rightarrow C_6H_5 - COOH$
- (ii) Benzene \rightarrow m-bromophenol
- (iii) $C_6H_5COOH \rightarrow C_6H_5NH_2$
- (iv) Aniline \rightarrow 2, 4, 6 tribromoaniline
- (v) Benzylchloride \rightarrow 2-phenyl ethanamine



VALUE BASED QUESTIONS (4 Marks)

Q. 1. Sushil's friend want to play Holi with synthetic colours. Ramesh persuades his friends to play Holi with natural colours as synthetic colours may cause skin allergy. Sushil's friends agreed and prepared natural colours using flowers and leaves.

How are following dyes prepared from phenol :

- (i) p-hydroxyazobenzene
- (ii) p-aminoazobenzene
- (iii) Write the name of one pigment present in natural colours.
(Hint : Carotenoids)
- (iv) Mention the values shown by Sushil.

Q. 2. Neetu and Asha took organic compound synthesis as their chemistry project. They prepared benzene diazonium chloride and stored it at room temperature. Due to holiday, they start preparing azo dye but it cannot be prepared. Then, their friend Reena told them to prepare benzene diazonium chloride again and to use it immediately to prepare azo dye and they proceed accordingly and prepared azo dye successfully.

- (i) Write the chemical reaction involved in azo dye formation.
- (ii) Write the values associated with the suggestion given by Reena.

How is diazonium salt used in the preparation of following dyes :

- (iii) p-hydroxyazobenzene
- (iv) p-aminoazobenzene

UNIT 14

BIOMOLECULES

1. **Carbohydrates** : These are optically active polyhydroxy aldehydes or ketones or the compounds which produce these on hydrolysis.

2. **Classification** :

(i) **Monosaccharides** : Those carbohydrates which cannot be hydrolysed into further simpler carbohydrates. *E.g.*, glucose, fructose, galactose etc.

(ii) **Disaccharides** : Those carbohydrates which produces two monosaccharides on hydrolysis. *E.g.*, sucrose, maltose and lactose.

(iii) **Oligosaccharides** : Those carbohydrates which give two to ten monosaccharides on hydrolysis.

(iv) **Polysaccharides** : Those carbohydrates which on hydrolysis give large number of monosaccharides hydrolysis. *E.g.*, starch, cellulose, glycogen.

3. **Sugar** : Carbohydrates which are sweet in taste.

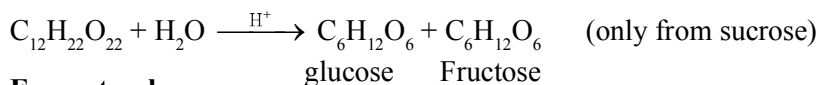
(i) **Reducing sugars** : Those which reduce Fehling's or Tollen's reagent due to availability of free aldehydic groups. *E.g.*, glucose, fructose, galactose.

(ii) **Non-reducing sugars** : Those which do not reduce Fehling's or Tollen's reagent. They do not have free aldehydic group. *E.g.*, sucrose.

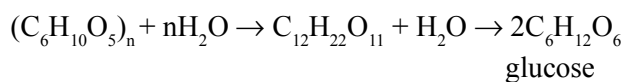
4. **Glucose** : It is a monosaccharide with molecular formula $C_6H_{12}O_6$.

5. **Preparation** :

(i) **From sucrose** :



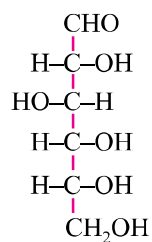
(ii) **From starch** :



6. **Structure** :

Fischer structure :

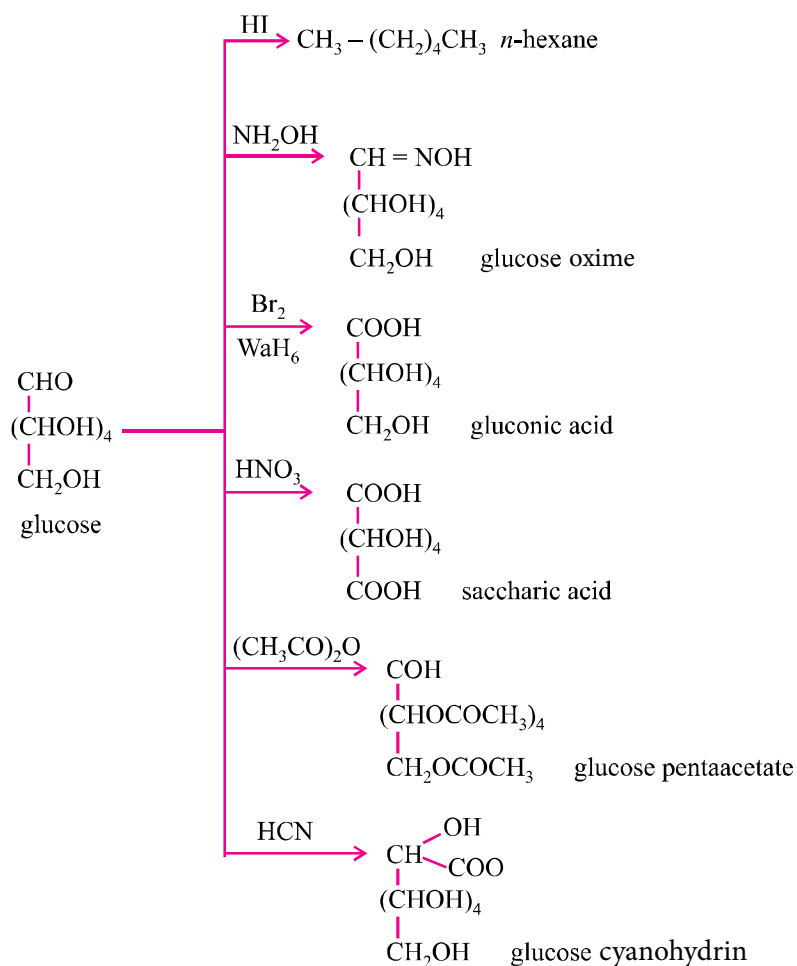
(+) glucose has 'D' configuration as shown :



D-(+)-glucose

'D' - means -OH group on first chiral 'C' from the bottom is on right hand and (+) means it is dextrorotatory *i.e.*, it rotates plane polarized light towards right.

Reactions of glucose :



Objections against open chain structure of glucose

The open chain structure was unable to explain the following reactions :

- It does not give the 2, 4-DNP test, Schiff's test and does not form the hydrogensulphide product with NaHSO_3 .
- The pentacetate of glucose does not react with NH_2OH , indicating the absence of free aldehydic group.
- Glucose exist in 2 different crystalline forms α and β forms. These are called anomers. They differ in optical rotation, they also differ in melting point.

After which a close chain (cyclic) structure of glucose was proposed by Haworth.

* Anomers are isomers which have a different configuration at C-1 functional group c-atom

- Glycosidic linkage :** The linkage between two monosaccharide units through oxygen is called the glycosidic linkage.
- Proteins :** These are macro molecules made up of amino acids joined by amide linkage $[-(-\text{CONH}-)-]$ is here called as peptide linkage. These are required for growth and development of the body.
- Amino acids :** These contain an amino ($-\text{NH}_2$) and an acidic ($-\text{COOH}$) group and are therefore amphoteric in nature. In solution they exist in the form of zwitter ion (a dipolar ion).
- Classification**

Fibrous Protein	Glubular Protein
(i) Polypeptide chains run parallel or anti-parallel and held together by hydrogen and disulphide bonds.	(i) Chains of polypeptide coil around to give a spherical shape.
(ii) Generally insoluble in water <i>e.g.</i> , keratin, collagen, myosin, fibroin.	(ii) Usually soluble in water, <i>e.g.</i> , insulin, thyroglobin, albumin, haemoglobin and fibrinogen gets converted into fibrous protein fibroin on clotting of blood.

11. Structure and shape of protein (Ref. page no. 416 NCERT Book)

Primary structure	Secondary structure	Tertiary structure	Quaternary structure
The specific sequence of amino acids in the polypeptide chain. Change in amino acids sequence changes the protein completely. They have covalent bonds.	It is the shape in which the long polypeptide chain can exist. It is of two types : α -helix and β -pleated. These structures arise due to regular folding of the backbone of the polypeptide chain due to H-bonding between the C = O and -NH - groups of the peptide bond.	Represents overall folding of the polypeptide chain. It gives rise to the fibrous or globular molecular shapes. Forces stabilizing the 2° and 3° structures are hydrogen bonds, disulphide linkages, van der Waal's and electrostatic forces of attraction.	Protein can be composed of two or more polypeptide chains called sub-units. The spatial arrangement of these sub-units with respect to each other is quaternary structure of the protein.

12. **Native state of protein** : The parental state or the natural state in which the protein is found.

13. **Denaturation of protein** : Destruction of the native state of protein is denaturation. It can be brought by physical and chemical methods. The 2° and 3° structures are destroyed, only 1° structure is retained.

Enzymes : These are biocatalyst and generally globular proteins *e.g.*, invertase, zymase, phenyl, alaninehydroxylase, urease etc.

Main characteristics of enzymes :

- (i) It speed up the biological reaction upto million times.
- (ii) It is highly specific and work on lock and key theory.
- (iii) It is highly sensitive to pH and temperature.

14. **Vitamins** : They are organic compounds required in the diet in small amounts to perform specific biological functions for maintenance of optimum growth and health of the organism. They are classified as follows :

- (i) **Fat soluble vitamins** : Vitamin A, D, E and K. They are stored in liver and adipose tissues.

- (ii) **Water soluble vitamins** : B group vitamins and vitamin C. They need to be supplied regularly in diet as they are excreted in urine and cannot be stored (except vitamin B₁₂) in our body.

Their deficiency causes diseases. (Ref. table in page no. 418 of NCERT Book)

Biotin (Vit H) is however neither fat nor water soluble. Its deficiency leads to loss of hair.

15. **Nucleic acids** : These are biomolecules which are long chain polymers of nucleotides. They are of two types :

(i) **Deoxyribonucleic acid (DNA)**

(ii) **Ribonucleic acid (RNA)**

16. Vitamin	Deficiency disease
A	Xerophthalmia, night blindness
B ₁	Beri-beri
B ₂	Ariboflavinosis, cheilosis, burning sensation of skin
B ₁₂	Pernicious anaemia, inflammation of tongue and mouth
C	Scurvy
D	Rickets & osteomalacia
E	Increased fragility of RBC and muscular weakness
K	Increased blood clotting time
H	Loss of hair

17. Hormones are chemical substances which are produced in ductless glands in the body.

18. Nucleoside = Base + Sugar

Nucleotide = Base + Sugar + Phosphate

19. DNA	RNA
(i) Double helical.	(i) Single stranded.
(ii) Sugar is 2-deoxyribose.	(ii) Sugar is ribose.
(iii) Bases : A, T, G, C.	(iii) Bases : A, U, G, C.
(iv) Property of replication.	(iv) Do not replicate.
(v) It is responsible for transmission of heredity character.	(v) Helps in protein biosynthesis.

VERY SHORT ANSWER TYPE QUESTIONS (1 Mark)

Q. 1. Name polysaccharides which is stored in the liver of animals.

Ans. Glycogen.

Q. 2. What structural feature is required for a carbohydrate to behave as reducing sugar ?

Ans. The carbonyl group of any one monosaccharide present in carbohydrate should be free.

Q. 3. Give the significance of (+) sign in the name D-(+)-glucose.

Ans. (+) sign indicates dextro-rotatory nature of glucose.

Q. 4. Glucose is an aldose sugar but it does not react with sodium hydrogen sulphite. Give reason.

Ans. The – CHO group reacts with – OH group at C-5 to form a cyclic hemiacetal.

Q. 5. Why is sucrose called invert sugar ?

Ans. When sucrose is hydrolysed by water, the optical rotation of solution changes from positive to negative.

Q. 6. Name the amino acid which is not optically active.

Ans. Glycine.

Q. 7. Give reason :

Amylase present in the saliva becomes inactive in the stomach.

Ans. HCl present in stomach decreases the pH.

Q. 8. Which forces are responsible for the stability of α -helical structure of proteins ?

Ans. Hydrogen bonding.

Q. 9. Which nucleic acid is responsible for carrying out protein synthesis in the cell ?

Ans. RNA (Ribonucleic acid)

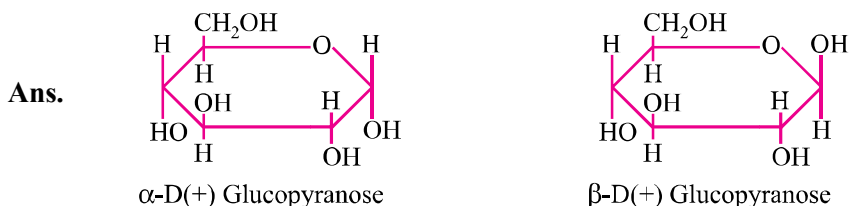
Q. 10. When RNA is hydrolysed, there is no relationship among quantities of different bases obtained. What does this fact suggest about structures of RNA ?

Ans. RNA is single stranded.

Q. 11. What type of linkage holds together the monomers of DNA and RNA ?

Ans. Phosphodiester linkage.

Q. 12. Give the Howarth projection of D-glucopyranose.



Q. 13. Name the vitamin responsible for coagulation of blood.

Ans. Vitamin K.

Q. 14. Where does the water present in the egg go after boiling the egg ?

Ans. On boiling, during denaturation process water gets absorbed in denaturated proteins.

Q. 15. What is native state of protein ?

Ans. The energetically most stable shape of the protein at normal pH and temperature is called native state.

Q. 16. Why is cellulose not digested in human body ?

Ans. It is due to the fact that human beings do not have enzyme to digest cellulose.

Q. 17. Name the enzyme that is used to dissolve blood clots ?

Ans. Streptokinase.

Q. 18. Name two diseases caused due to deficiency of enzymes.

Ans. Albinism and phenyl keto urea.

Q. 19. Give one example of : (a) water soluble, (b) fat soluble vitamins.

Ans. (a) Vitamin C (b) Vitamin D

Q. 20. Name a protein which is insoluble in water.

Ans. Keratin.

Q. 21. Name the deficiency disease resulting from lack of Vitamin 'A' in the diet.

Ans. Night blindness, Xerophthalmia.

Q. 22. Mention two important functions of carbohydrates in plants.

Ans. Major energy source, storage molecules like starch in plants.

Q. 23. Name two of the different types of RNA molecules found in cells of organisms.

Ans. tRNA, mRNA, rRNA.

Q. 24. The deficiency of which vitamin causes the disease pernicious anaemia ?

Ans. Vitamin B₁₂.

Q. 25. Why are carbohydrates generally optically active ?

Ans. Because they contain one or more chiral atom.

Q. 26. During curdling of milk, what happens to sugar present in it ?

Ans. Lactose changes to lactic acid.

Q. 27. What are the products of hydrolysis of lactose ?

Ans. β-D-galactose and β-D-glucose.

Q. 28. The two strands in DNA are not identical but complementary. Explain.

Ans. Base pairing rule is followed; A = T and G ≡ C.

Q. 29. If one strand of DNA has the sequence 5'-G-G-A-C-T-A-C-T-3', what is the sequence of bases in the complementary strand ?

Ans. 3'-C-C-T-G-A-T-G-A-5'

Q. 30. What are monosaccharides ?

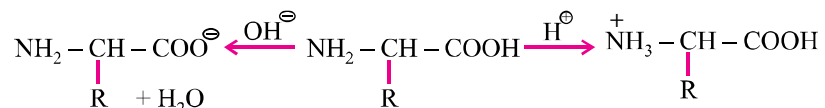
Ans. Sugars which cannot be hydrolysed to give simpler units or compounds.

Q. 31. What is the difference between native protein and denatured protein ?

Ans. Proteins found in a biological system with unique 3D-structure and biological activity is called native protein. When native protein is subjected to physical and chemical change, protein loses its biological activity and is called denatured protein.

Q. 32. Amino acids are amphoteric in nature. Explain.

Ans. It can react with acid and base both as per the following reaction :



SHORT ANSWER-I TYPE QUESTIONS (2 Marks)

Q. 1. Define the following terms in relation to proteins :

- (i) **Peptide linkage** (ii) **Denaturation**

Ans. (i) Peptide linkage : A link between two amino acids with loss of water /– CO – NH – peptide linkage.

- (ii) A process that changes the three dimensional structure of native protein is called denaturation of protein. It results into breaking of hydrogen bonds and disulphide linkages. Thus, a completely denatured protein has a shape of random coil.

Q. 2. List the reactions of glucose which cannot be explained by its open chain structure.

Ans. (i) Despite having the aldehyde group, glucose does not give 2, 4 DNP test or Schiff's test.

- (ii) It does not form hydrogensulphite addition product with NaHSO_3 .

- (iii) The penta acetate of glucose does not react with hydroxylamine indicating the absence of free – CHO group.

Q. 3. Explain what is meant by :

- (i) **Biocatalyst** (ii) **Peptide linkage**

Ans. (i) Biocatalysts are the catalysts which increases the rate of metabolism/ biochemical reactions.

- (ii) **Peptide linkage :** A link between two amino acids with loss of water/– CO – NH – peptide linkage.

Q. 4. Explain the following terms :

- (i) **Invert sugar** (ii) **Polypeptides**

Ans. (i) An equimolar mixture of glucose and fructose produced on hydrolysis of sucrose is called invert sugar. It is called so because sucrose is dextro rotator whereas its hydrolysis product is laevo rotatory.

- (ii) Polypeptides are polymers of amino acids containing less than 100 amino acids. For example, oxytocin, vasopressin, etc.

Q. 5. Explain what is meant by :

- (i) **Peptide linkage** (ii) **Glycosidic linkage**

Ans. (i) Refer Q1 of SA-I type question

(ii) The linkage between the monosaccharide units through oxygen is called glycosidic linkage.

Q. 6. Name the product of hydrolysis of sucrose. Why is sucrose not a reducing sugar ?

Ans. On hydrolysis, sucrose gives equimolar mixture of D-(+)-glucose and D(-)-fructose. Sucrose is not a reducing sugar as glucose and fructose are linked through their reducing centres in structure of sucrose.

Q. 7. State clearly what are known as nucleotides and nucleosides.

Ans. A nucleoside contain only two basic components of nucleic acids *i.e.*, pentose sugar and nitrogenous base.

A nucleotide contains all the three basic components of nucleic acids *i.e.*, a phosphoric acid group, pentose sugar and nitrogenous base.

Q. 8. Describe what do you understand by primary structure and secondary structure of proteins.

Ans. Primary structure of proteins : The protein in which amino acids linked with each other in a specific sequence is said to be the primary structure of that protein.

Secondary structure of proteins : It refers to the shape in which a long polypeptide chain can exist *i.e.*, α -helix and β -pleated structure.

Q. 9. What is essentially the difference between α -form of glucose and β -form of glucose ? Explain.

Ans. α -form of glucose and β -form of glucose differ only in the configuration of the hydroxyl group at C_1 in cyclic structure of glucose/hemiacetal form of glucose.

Q. 10. Explain :

(i) **Mutarotation**

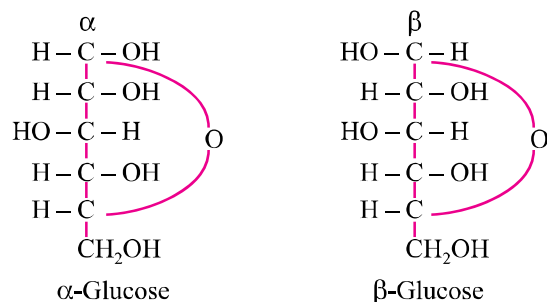
(ii) **Avitamineosis**

Ans. (i) Mutarotation : Spontaneous change in specific rotation of an optically active compound with time, to an equilibrium value is called mutarotation.

(ii) **Avitamineosis :** Multiple deficiencies caused by lack of more than one vitamin is called avitamineosis.

Q. 11. What are anomers ? Give the structures of two anomers of glucose.

Ans. Monosaccharides which differs in configuration at C-1, *e.g.*, α -glucose and β -glucose.



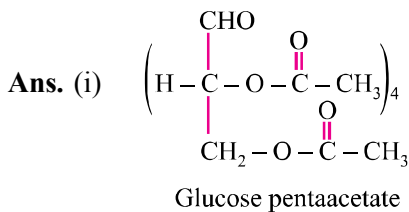
Q. 12. Write the hydrolysed product of :

- (i) Maltose (ii) Cellulose

Ans. (i) α -D-glucose (ii) β -D-glucose

Q. 13. (i) Acetylation of glucose with acetic anhydride gives glucose penta-acetate. Write the structure of penta acetate.

- (ii) Explain why glucose penta acetate does not react with hydroxylamine ?



- (ii) The molecule of glucose penta acetate has a cyclic structure in which –CHO is involved in ring formation with –OH group at C-5.

Q. 14. What are vitamins ? How are they classified ?

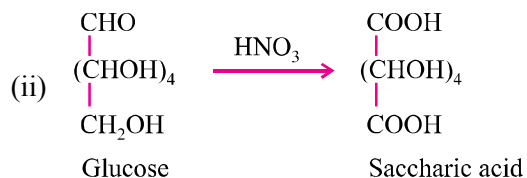
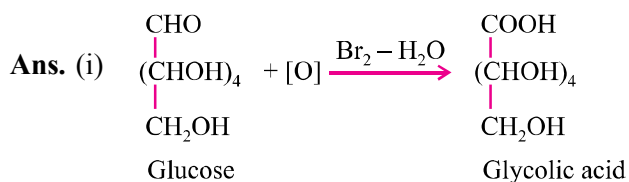
Ans. Vitamins are a group of biomolecules (other than carbohydrates, fats and proteins) most of which cannot be produced by body but must be supplied in small amount to perform specific biological functions of the body.

Types :

- (i) **Water soluble vitamins :** Vitamin B and C.
(ii) **Fat soluble vitamins :** Vitamin A, D, E and K.

Q. 15. Write the products of oxidation of glucose with :

- (i) Bromine water
(ii) Nitric acid



Q. 16. State two main differences between globular and fibrous proteins.

Ans.	Globular protein	Fibrous protein
(i)	They form a α -helix structure.	(i) They have β -pleated structure.
(ii)	They are water soluble.	(ii) They are water insoluble.

Q. 17. (i) Name the disease caused by deficiency of vitamin D.

(ii) Why cannot vitamin C be stored in our body ?

- Ans. (i) Rickets.
- (ii) Vitamin C is a water soluble vitamin which is excreted in urine and cannot be stored in our body.

Q. 18. Name the constituents of starch and what is the difference between them ?

Ans. **Amylase** : A linear polymer of α -glucose, water soluble.

Amylopectin : Branched polymer of α -glucose, water insoluble.

Q. 19. What are essential and non-essential amino acid ? Give two examples of each type.

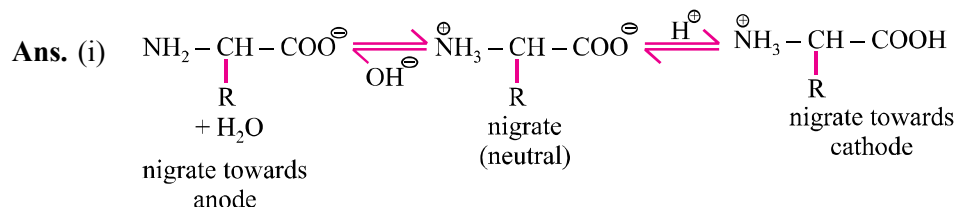
Ans. Essential amino acids are those which are not produced in our body and required to be supplied from outside, *e.g.*, valine, leucine.

Non-essential amino acids are those which are produced by our body, *e.g.*, glycine, alanine.

Q. 20. Give reasons :

- (i) **On electrolysis in acidic solution amino acids migrate towards cathode while in alkaline solution these migrate towards anode.**

(ii) **The monoamino monocarboxylic acids have two p_k values.**



(ii) Due to zwitter ion formation.

Q. 21. Coagulation of egg white on boiling is an example of denaturation of protein. Explain it in terms of structural changes.

Ans. Protein albumin present in egg white gets denatured *i.e.*, 2° & 3° structures are destroyed and 1° structure is retained.

Q. 22. Describe two important functions of nucleic acids.

Ans. (i) DNA is responsible for transfer of heredity information from one generation to another.

(ii) RNA is responsible for protein synthesis.

Q. 23. Hormones are called chemical messengers. Explain.

Ans. Hormones are molecules that act as intercellular messengers. These are produced by endocrine glands in the body and are poured directly in the blood stream which transports them to the site of action.

For example,

(i) Glucocorticoids control carbohydrate metabolism.

(ii) Testosterone is responsible for development of 2° male characteristics like deep voice, facial hair or general physical constitution.

SHORT ANSWER-II TYPE QUESTIONS (3 Marks)

Q. 1. (i) Deficiency of which vitamin causes scurvy ?

(ii) What type of linkage is responsible for the formation of proteins ?

(iii) Write the product formed when glucose is treated with HI.

Ans. (i) Vitamin C.

(ii) Peptide linkage.

(iii) n-hexane.

Q. 2. (i) Write the name of two monosaccharides obtained by hydrolysis of lactose sugar.

(ii) Why vitamin C cannot be stored in our body ?

(iii) What is the difference between nucleotide and nucleoside ?

Ans. (i) β -D-glucose and β -D-galactose.

(ii) Water soluble, excreted out of body.

(iii) In nucleotide, phosphoric acid/phosphate group attached to the nucleoside/
nucleotide = base + sugar + phosphate group, nucleoside = base + sugar.

Q. 3. (i) Deficiency of which vitamin causes night blindness ?

(ii) Name the base that is found in nucleotide of RNA only.

(iii) Glucose on reaction with HI gives n-hexane. What does it suggest about structure of glucose ?

Ans. (i) Vitamin A.

(ii) Uracil.

(iii) This reaction suggests that all six carbon atoms in glucose are arranged in a straight chain.

Q. 4. Differentiate between the following :

(i) Secondary and tertiary structure of protein

(ii) α -helix and β -pleated sheet structure of protein

(iii) Fibrous and globular protein

Ans. (i) **Secondary structure** is responsible for the shape of protein α -helix and β -pleated sheets in which polypeptide chains have peptide bonds.

Tertiary structure represents overall folding of polypeptide chain and give rise to the fibrous or globular molecular shape.

(ii) α -helix structure : The peptide chains coiled up to form right handed helix involving H-bonding (Intramolecular).

β -pleated sheets : The peptide chains lie side by side together by intermolecular hydrogen bonding.

(iii) Same as Q. 16 (Two marks questions)

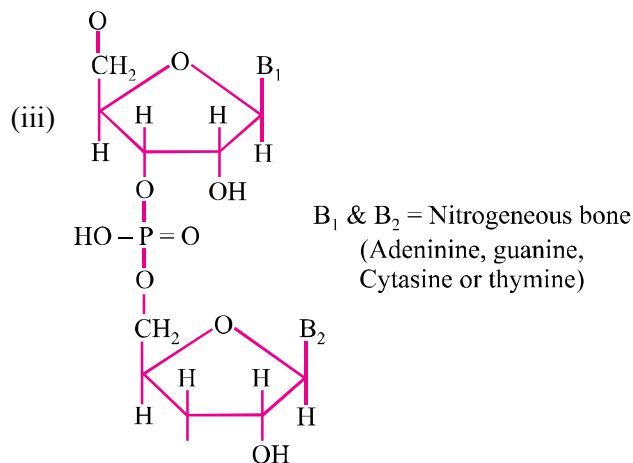
Q. 5. (i) Name the four bases present in DNA.

(ii) Which of them is not present in RNA ?

(iii) Give the structure of a nucleotide of DNA.

Ans. (i) Adenine, Guanine, Thymine, Cytosine.

(ii) Thymine.



Q. 6. Define with example :

(i) Isoelectric point

(ii) Mutarotation

(iii) Transcription

Ans. (i) Isoelectric point : The pH at which there is no net migration of any ion towards electrode *e.g.*, amino acids have isoelectric point at pH = 5.5-6.3.

(ii) Mutarotation : It is spontaneous change in optical rotation when an optically active substance is dissolved in water *e.g.*, α -glucose when dissolved in water changes its optical rotation from 111° to 52.5° .

(iii) Transcription : It is process by which m-RNA is generated from DNA *e.g.*, if DNA has base sequence ATACA then m-RNA has base sequence UAUCGU

Q. 7. Glucose or sucrose are soluble in water but cyclohexane and benzene are insoluble in water. Explain.

Ans. Glucose contain 5 – OH groups and sucrose contain eight – OH groups, because of this they form intermolecular hydrogen bonding, so they are soluble in water.

But benzene and cyclohexane doesn't contain – OH groups hence doesn't form intermolecular hydrogen bonding, so they are not soluble in water.

Q. 8.(i) Fructose contains a keto group but still it reduces Tollen's reagent. Explain.

(ii) Give the chemical name and sources of :

(a) Vitamin C

(b) Vitamin B₁

Q.9. Name the components of starch. How do they differ from each other structurally ?

Ans. Amylose and Amylopectin.

Amylose is long unbranched chain with α -D-glucose units held by C1-C4 glycosidic linkage.

Amylopectin is branched chain polymer of α -D-glucose formed by C1-C4 glycosidic linkage and branching occurs by C1-C6 glycosidic linkage.

LONG ANSWER TYPE QUESTIONS (5 Marks)

Q. 1. (i) Give one example each of fibrous protein and globular protein.

(ii) What happens when D-glucose reacts with Br₂ water ?

(iii) What type of linkage is responsible for the formation of protein ?

(iv) Explain mutarotation with suitable example.

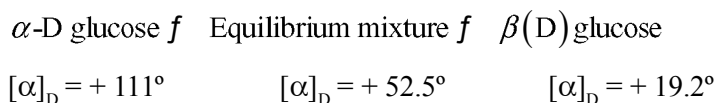
Ans. (i) Fibrous protein : Keratin

Globular protein : Hormone

(ii) $C_6H_{12}O_6 + Br_2 \text{ water} \rightarrow \text{gluconic acid}$

(iii) Peptide bond

(iv) Spontaneous change in specific rotation of an optically active compound with time, to an equilibrium value is called mutarotation. For example,



Q. 2. (i) Name the three major classes of carbohydrates and give an example of each of these classes.

(ii) Answer the following :

(a) What type of linkage is responsible for primary structure of proteins ?

(b) Name the location where protein synthesis occurs in our body

Ans. (i) Carbohydrates are classified as :

(a) Monosaccharides *e.g.*, Glucose.

(b) Oligosaccharides *e.g.*, Sucrose

(c) Polysaccharides *e.g.*, Starch

(ii) (a) Peptide bond

(b) Protein synthesis occurs in cytoplasm of cell by mRNA with the help of rRNA and tRNA.

HOTS

Q. 1. An optically active compound having molecular formula $\text{C}_6\text{H}_{12}\text{O}_6$ is found in two isomeric forms [A] and [B] in nature. When [A] and [B] are dissolved in water, they show the following equilibrium :



$$[\alpha]_D = 111^\circ \quad 52.2^\circ \quad (19.2^\circ)$$

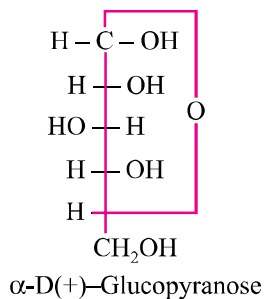
(i) What are such isomer called ?

(ii) Can they be called enantiomers ? Justify your answer.

(iii) Draw cyclic structure of isomer (A).

Ans. (i) Such isomers are called **anomers**.

- (ii) These anomers cannot be called enantiomers because they are not mirror images of each other (or they do not rotate the plane polarized light equally but in opposite directions).
- (iii) Cyclic structure of A [α -D(+)-glucopyranose] is given as :

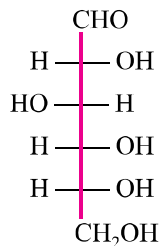


Q. 2. Name the vitamins whose deficiency is responsible for :

- (i) Night blindness (ii) Poor coagulation of blood
(iii) Sterility

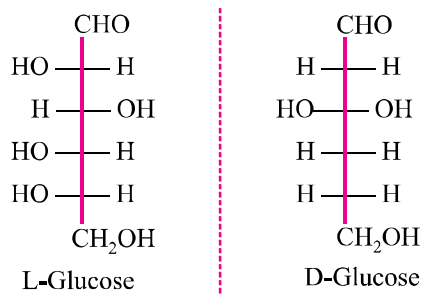
Ans. (i) Vitamin A (ii) Vitamin K
(iii) Vitamin E

Q. 3. The Fischer projection of D-glucose is :

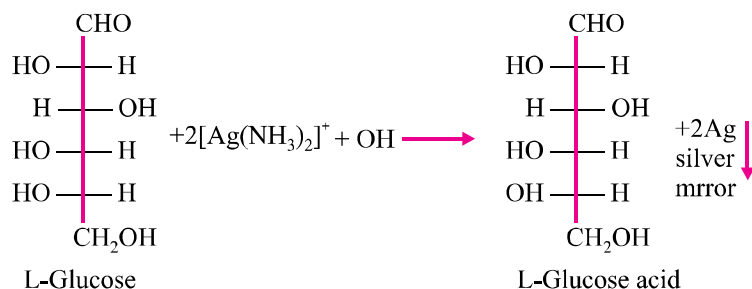


- (i) Give the Fischer projection of L-glucose.
(ii) What happens when L-glucose is treated with Tollen's reagent ?

Ans. (i) The Fischer projection of L-glucose is the mirror image of D-glucose.



- (ii) L-glucose reduces Tollen's reagent to silver mirror.

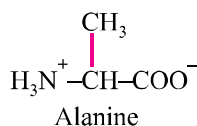


Q. 4. An optically active amino acid (A) can exist in three forms depending on the pH of the medium. The molecular formula of (A) is $\text{C}_3\text{H}_7\text{NO}_2$.

- Write the structure of compound (A) in aqueous medium. What are such ions called ?
- In which medium will the cationic form of compound (A) exist ?
- In alkaline medium, towards which electrode will the compound (A) migrate in electric field ?

Ans. A = Alanine.

- (i) An aqueous medium alanine exists as Zwitter ion.



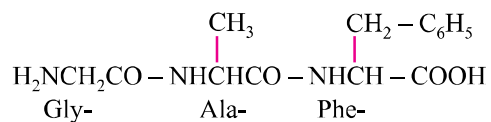
- In acidic medium.
- In alkaline medium, it will exist in anionic form and will migrate towards anode in electric field.

Q. 5. If three amino acids viz., glycine, alanine and phenyl alanine react together, how many possible tripeptides can be formed ? Write down the structures and names of each one. Also write their names using three and one letter abbreviations for each amino acid.

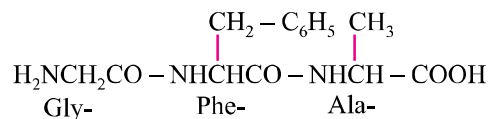
Ans. If each of the amino acids is used only once, then six tripeptides are possible :

- (i) **Glycylalanyl phenylalanine.**

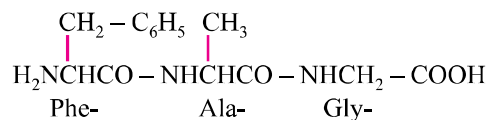
(Gly-Ala-Phe) (G-A-F).

**(ii) Glycylphenylalanyl alanine.**

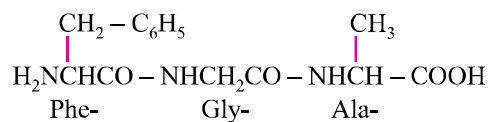
(Gly-Phe-Ala) (G-F-A).

**(iii) Phenylalanylalanyl glycine.**

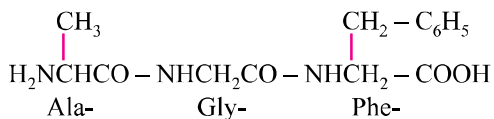
(Phe-Ala-Gly) (F-A-G).

**(iv) Phenylalanylglycyl alanine.**

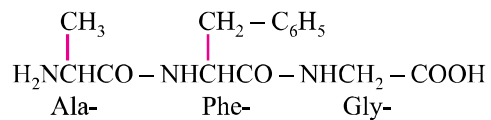
(Phe-Gly-Ala) (F-G-A).

**(v) Alanylglycyl phenylalanine.**

(Ala-Gly-Phe) (A-G-F).

**(vi) Alanylphenylalanyl glycine.**

(Ala-Phe-Gly) (A-F-G).



UNIT 15

POLYMERS

- Polymer :** It is a very large molecule having molecular mass 10^3 - 10^7 g mol⁻¹. They are formed by joining together repeating structural units, called monomers.
- Classification of Polymers :**
 - Based on Source :**
 - Natural :** Found in plants and animals, e.g., Proteins, cellulose, natural rubber, silk, wool.
 - Synthetic :** Man-made, e.g., Nylon, polyester, neoprene, bakelite, teflon, PVC, polystyrene.
 - Based on Structure :**
 - Linear polymers :** This consist of long and straight chain repeating units, e.g., Polythene (HDPE), PVC, nylon, polyester.
 - Branched polymers :** This contain linear chains having some branches, e.g., amylopectin, glycogen etc.
 - Cross-linked polymers :** Strong covalent bonds are present between various linear polymer chains, e.g., Bakelite, urea-formaldehyde polymer, melamine, formaldehyde polymer etc.
 - Based on mode of polymerization :**
 - Addition polymers :** These are formed by the repeated addition of monomer molecules possessing multiple bonds, e.g., polythene, polypropene, polystyrene, PMMA (polymethyl metha crylate).
 - Condensation polymers :** These are formed by the repeated condensation reaction of different bifunctional or trifunctional monomers with the elimination of small molecules like water, HCl, NH₃, alcohol, etc., e.g., Bakelite, nylon, polyester, urea-formaldehyde resin.
 - Based on molecular forces :**
 - Elastomers :** Forces of interaction between polymer chains is weakest, e.g., natural rubber, neoprene, vulcanized rubber.

- (ii) **Fibers** : Strong hydrogen bonds are present between the polymer chains. They have high tensile strength, e.g., Nylon, polyester, silk, wool, orlon, rayon etc.
- (iii) **Thermoplastics** : They are linear/slightly branched chains molecules capable of repeated softening on heating and hardening on cooling, e.g., Polythene, PVC, polystyrene, polypropene.
- (iv) **Thermosetting plastics** : They are cross-linked or heavily branched molecules, which on heating undergo extensive cross-linkages and become infusible, e.g., Bakelite, urea-formaldehyde resin.
- (e) **Based on growth of polymerization** : Depending upon the mechanism of polymerization, polymers are classified as :
- (i) **Addition polymers or Chain growth polymers** : They follow mostly free radical mechanism.
- (ii) **Condensation polymers or Step growth polymers** : Because they are formed in gradual steps.

Polymers and Their Monomers

S. No.	Name of Polymer	Structure	Monomer	Uses
1.	Polythene	$(-\text{CH}_2-\text{CH}_2-)_n$	$\text{CH}_2=\text{CH}_2$ Z	As insulator, anticorrosive, packing material, household and laboratory wares.
2.	Polystyrene	$\begin{array}{c} \text{CH}_2 = \text{CH}_2 \\ \\ \text{C}_6\text{H}_5 \end{array}$ Styren	$\begin{array}{c} \text{CH}_2 = \text{CH}_2 \\ \\ \text{C}_6\text{H}_5 \end{array}$ Styrene	As insulator, wrapping material, manufacture of toys and household articles.
3.	Polyvinylchloride (PVC)	$\begin{array}{c} \text{Cl} \\ \\ (-\text{CH}_2-\text{CH}-)_n \end{array}$	$\text{CH}_2 = \text{CHCl}$ Vinyl chloride	In manufacture of rain-coats, hand bags, vinyl flooring and leather clothes.
4.	Polytetrafluoroethylene (PTFE) or Teflon	$(-\text{CF}_2-\text{CF}_2-)_n$	$\text{CF}_2 = \text{CF}_2$ TFE	As lubricant, insulator and making cooking wares.
5.	NOVOLAC	$\left(\begin{array}{c} \text{OH} \quad \text{OH} \\ \quad \\ \text{C}_6\text{H}_4 \quad \text{C}_6\text{H}_4 \\ \quad \\ \text{CH}_2 \quad \text{CH}_2 \end{array} \right)_n$	(a) HCHO (b) $\text{C}_6\text{H}_5\text{OH}$	In making bonding give varnishes, lacquers etc.
6.	Polyacrylonitrile (Orion) (Acrilan)	$\begin{array}{c} \text{CN} \\ \\ (-\text{CH}_2-\text{CH}-)_n \end{array}$	$\text{CH}_2 = \text{CHCN}$ Acrylonitrile	In making synthetic fibres and synthetic wool.
7.	Styrene butadiene rubber (SBR or Buna-S)	$(-\text{CH}_2-\text{CH}(\text{C}_6\text{H}_5)-\text{CH}=\text{CH}-\text{CH}_2-)_n$	(a) $\text{CH}_2 = \text{CH} - \text{CH} = \text{CH}_2$ (b) $\begin{array}{c} \text{CH} = \text{CH}_2 \\ \\ \text{C}_6\text{H}_5 \end{array}$	In making automobile tyres and footwear.

Ans. Nylon

Q. 11. Name a natural elastomer.

Ans. Natural rubber.

Q. 12. Write name of a synthetic polymer which is an ester.

Ans. Terylene.

Q. 13. Name of monomer of Nylon 6.

Ans. Aminocaproic acid

Q. 14. Write the monomer units of bakelite.

Ans. Phenol and formaldehyde.

Q. 15. Define a copolymer.

Ans. The polymers made by addition polymerisation from two different monomers are termed as copolymers. E.g., Buna-S, Buna-N etc.

Q. 16. Write one use of PVC.

Ans. In manufacture of raincoats and vinyl flooring.

Q. 17. Define polymer.

Ans. Polymer is defined as very large molecules having molecular mass (10^3 - 10^7 u). These are also referred to as macromolecules.

Q. 18. Give an example of thermoplastics.

Ans. Thermoplastics are polythene, polystyrene, polyvinyls etc.

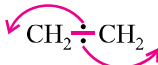
Q. 19. To which class of polymers does Nylon-66 belong ?

Ans. Polyamides.

Q. 20. Name the type of monomers in terylene.

Ans. Ethylene glycol and terephthalic acid.

Q. 21. How do you explain the functionality of a monomer ?

Ans. Functionality means the number of bonding sites in a molecule. E.g., 

Q. 22. Give chemical name of teflon.

Ans. Polytetrafluoroethene.

Q. 23. The Ziegler-Natta catalyst is used for polymerisation of..... .

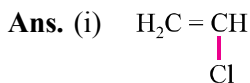
Ans. Triethylaluminium + Titanium tetrachloride

SHORT ANSWER-I TYPE QUESTIONS (2 Marks)

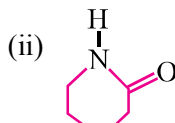
Q. 1. Draw the structure of monomers of each of the polymers :

(i) PVC

(ii) Nylon-6



Vinyl chloride



Caprolactum

Q. 2. What is the repeating unit in the condensation polymer obtained by combining $\text{HOOCCH}_2\text{CH}_2\text{COOH}$ (succinic acid) and $\text{H}_2\text{NCH}_2\text{CH}_2\text{NH}_2$ (ethylene diamine) ?



Q. 3. Draw the structure of monomers of the following polymers :

(i) Teflon

(ii) Polythene

Ans. (i) $\text{F}_2\text{C}=\text{CF}_2$ Tetrafluoroethene

(ii) $\text{H}_2\text{C}=\text{CH}_2$ Ethene

Q. 4. Name the two groups into which polymers are classified on the basis of magnitude of intermolecular forces.

Ans. (i) Elastomers

(ii) Fibres

(iii) Thermoplastic polymers

(iv) Thermosetting polymers

Q. 5. Mention two important uses of each of the following :

(i) Bakelite

(ii) Nylon-6

Ans. (i) Bakelite : For making combs, electrical switches, handles of utensils, computer disc etc.

(ii) **Nylon-6 :** For making tyre cords, fabrics, ropes etc.

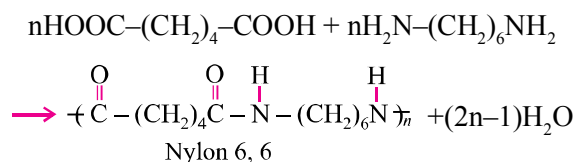
Q. 6. Distinguish between homopolymers and copolymers with an example of each.

Ans. Homopolymers : Polymers whose repeating structural units are derived from only one type of monomer units are called homopolymers. For example, Polythene.

Copolymers : Polymers whose repeating structural units are derived from two or more types of monomer units are called copolymers. For example, Nylon-6, 6.

Q. 7. What is step growth polymerisation ? Explain with an example.

Ans. Step growth polymerisation involves condensation between monomers having multifunctional groups. It is also known as condensation polymerisation. E.g.,



Q. 8. What is the difference between elastomers and fibres ? Give one example of each.

Ans. Elastomers : Polymers in which the intermolecular forces of attraction between the polymer chains are weakest are called elastomers. E.g., Natural rubber.

Fibres : Polymers in which intermolecular forces of attraction are the strongest are called fibres. E.g., Nylon-6, 6.

Q. 9. Mention the important uses of each :

- (i) Nylon-6, 6 (ii) PVC

Ans. (i) Uses of Nylon-6, 6 :

- (a) It is used in making carpets, textile fibres etc.
(b) It is used for making elastic hosiery.

(ii) Uses of PVC :

- (a) It is used for making raincoats, hand bags etc.
(b) It is used in making water pipes.

Q. 10. Arrange the following polymers in the order of increasing intermolecular forces :

- (i) Nylon-6, Buna-S, Polythene
(ii) Nylon-6, Neoprene, Polyvinyl chloride

Ans. (i) Buna-S < Polythene < Nylon-6

(ii) Neoprene < Polyvinyl chloride < Nylon-6

Q. 11. Define thermoplastic and thermosetting polymers. Give one example of each.

Ans. Thermoplastics : Polymers in which the intermolecular forces of attraction are in between those of elastomers and fibres are called thermoplastics. E.g., Nylon-6, PVC, etc.

Thermosetting polymers : These are semi-fluid substances with low molecular masses which when heated in a mould undergo a permanent change in chemical composition to give hard, infusible and insoluble mass. E.g., Bakelite.

Q. 12. What is biodegradable polymer ? Give an example of a biodegradable polymer.

Ans. Biodegradable polymers are those which are decomposed by micro organisms. E.g., PHBV (Poly-B-hydroxybutyrate – Co – B – hydroxyl valerate).

Q. 13. How does vulcanization change the character of natural rubber ?

Ans. It introduces sulphur bridge or cross-link between polymer chain.

Q. 14. Name a polymer each for the following applications :

(i) Insulation of electrical switches

(ii) Making laminated sheets

Ans. (i) Bakelite (ii) Urea formaldehyde resin

Q. 15. How does the presence of double bonds in rubber influence their structure and reactivity ?

Ans. Natural rubber is a cis-polyisoprene. These cis- double bonds do not allow to polymer unit to come close for effective interaction. Hence rubber show elasticity.

SHORT ANSWER-II TYPE QUESTIONS (3 Marks)

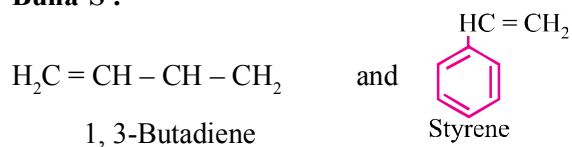
Q. 1. Write the names and structure of the monomers of the following polymers :

(i) Buna-S

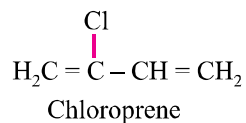
(ii) Neoprene

(iii) Nylon-6

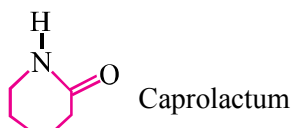
Ans. (i) Buna-S :



(ii) Neoprene :



(iii) Nylon-6 :



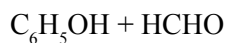
Q. 2. Differentiate between thermoplastics and thermosetting polymers. Give one example of each.

Ans. Same as Q. 11 (Two marks questions)

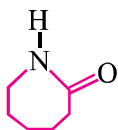
Q. 3. Write names and structure of monomers of following polymers :

(i) Bakelite (ii) Nylon-6 (iii) Polythene

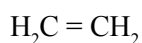
Ans. (i) Phenol and formaldehyde



(ii) Caprolactum



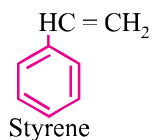
(iii) Ethene



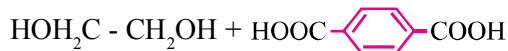
Q. 4. Write names and structure of monomers of following polymers :

(i) Polystyrene (ii) Dacron (iii) Teflon

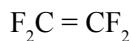
Ans. (i) Styrene



(ii) Ethylene glycol + Terephthalic acid



(iii) Tetrafluoroethene



Q. 5. (i) What is the role of t-butyl peroxide in the polymerisation of ethane ?

(ii) Identify the monomers in the following polymer :



(iii) Arrange the following polymers in the increasing order of their intermolecular forces :

Polystyrene, Terylene, Buna-S

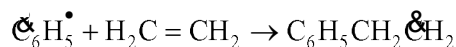
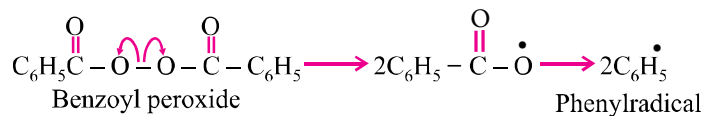
Ans. (i) Catalyst/initiator of free radical

(ii) Hexamethylenediamine and adipic acid

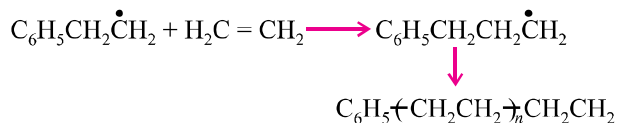
(iii) Buna-S < Polystyrene < Terylene

Q. 6. Write the mechanism of free radical polymerisation of ethane.

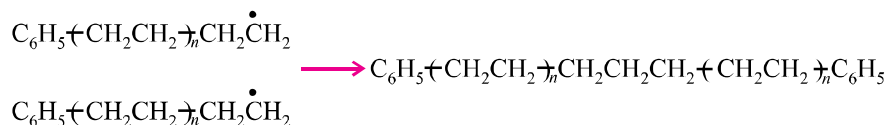
Ans. (i) Chain initiation step



(ii) Chain propagating step



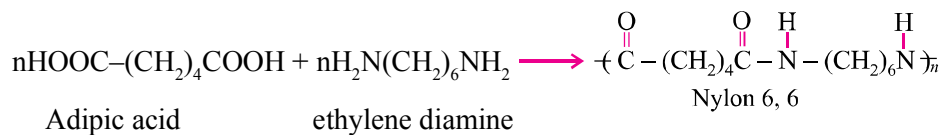
(iii) Chain terminating step



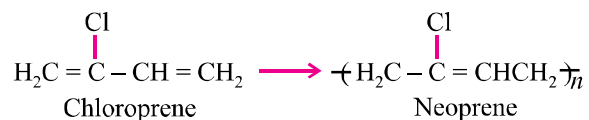
Q. 7. Write chemical equation for the synthesis of :

- (i) Nylon-6, 6 (ii) Neoprene (iii) Terylene

Ans. (i) Nylon-6, 6 :

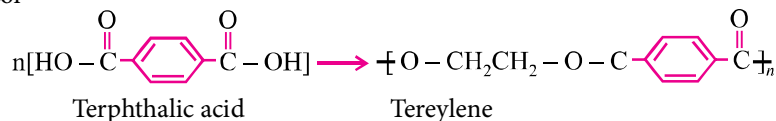


(ii) Neoprene :



(iii) Terylene :

$n\text{HO}-\text{CH}_2\text{CH}_2\text{OH} +$
Ethylene glycol



Q. 8. Write the monomers which are used for the synthesis of following polymers :

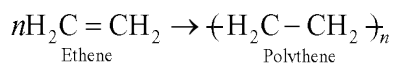
- (i) Terylene (ii) Polythene (iii) Bakelite

Indicate the type of polymerisation for each which forms polymers.

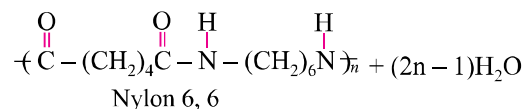
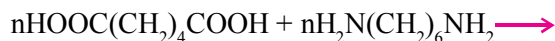
Ans.	Monomers	Type of polymerisation
(i)	Ethylene glycol + Terephthalic acid	Condensation
(ii)	Ethene	Addition
(iii)	Phenol + Formaldehyde	Condensation

Q. 9. How are polymers classified on the basis of mode of polymerisation ? Explain with examples.

Ans. Addition polymers : Are formed by repeated addition of a large number of same or different monomers possessing double or triple bonds. E.g., Polythene.



Condensation polymers : Are formed by repeated condensation reaction between two bifunctional or trifunctional monomer units usually with the elimination of small molecules like water, alcohol, ammonia, etc. E.g., Nylon-6, 6.

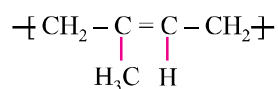


Q. 10. A monomer of a polymer on ozonolysis gives two moles of CH_2O and one mol of $\text{CH}_3\text{C}(=\text{O})\text{CHO}$. Write the structure of monomer and polymer and each step of reaction.

Ans. Structure of monomer :



Structure of polymer :



Q. 11. Can a copolymer be formed in both addition and condensation polymerisation ? Explain with examples.

Ans. Yes. Buna-S, Buna-N : Addition polymer

Nylon-6, 6, terylene : Condensation

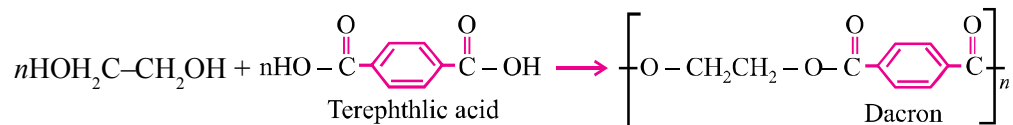
LONG ANSWER TYPE QUESTIONS (5 Marks)

Q. 1. How are following polymers obtained ? Write the names and structures of monomers and structure of respective polymers :

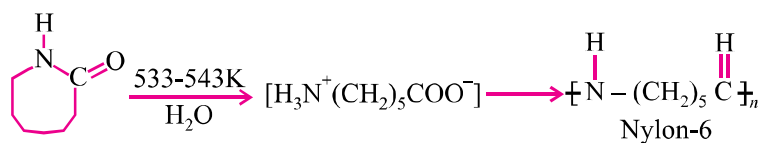
(i) Dacron (ii) Nylon-6 (iii) Buna-N

(iv) Glyptal (v) PHBV

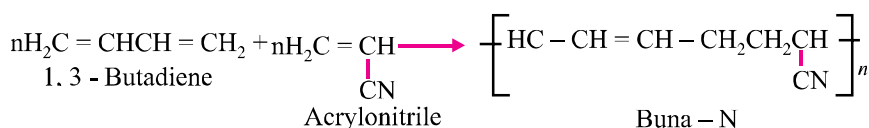
Ans. (i) Dacron : By condensation polymerisation.



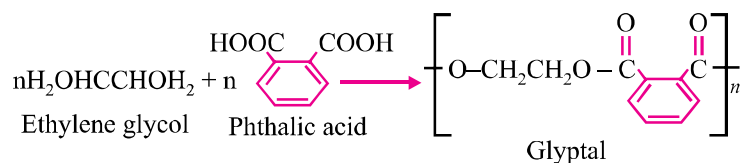
(ii) **Nylon-6 :** By condensation polymerisation.



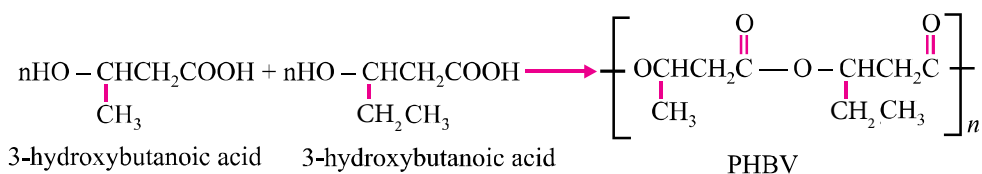
(iii) **Buna-N** : By addition polymerisation.



(iv) **Glyptal** : By condensation polymerisation.



(v) **PHBV** : By condensation polymerisation.



VALUE BASED QUESTIONS (4 Marks)

Q. 1. In school, lot of emphasis is given to 3R principle to Reduce, Refuse and Recycle.

Two shopkeepers, Naresh Jain is using bags made up of jute, a polymer of cellulose while Rakesh Gupta using polythene as packing material. Abdul Kadir, a science student told Rakesh Gupta not to use polythene bags for packing but to use jute bags.

- Why is jute preferred over polythene as packing material by Abdul Kadir ?
- Give monomers of jute and polythene.
- Is polythene an addition polymer or a condensation polymer ?
- Mention the values associated with the use of jute.

Q. 2. During war or accidents people get deep injuries which require stitching of wounds.

Rohit told his friend, Avi, that earlier these wounds were used to be stitched by nylon-6 thread but nowadays instead of it Nylon-2-Nylon-6 fibre is used.

- (i) Why should Nylon-2-Nylon-6 be used for stitching of wounds instead of Nylon-6 thread ?
 - (ii) Give monomers of Nylon-6 and Nylon-2-Nylon-6.
 - (iii) Is this polymer an addition polymer or a condensation polymer ?
 - (iv) Mention the values associated with use of Nylon-2-Nylon-6.
- Q. 3.** Two shopkeepers are using LDP (low density polythene) and HDP (high density polythene) polymers for packing of materials.
- (i) Name the polythene preferred for packaging.
 - (ii) Name the catalyst used in synthesis of HDP.
 - (iii) HDP has high density. Why ?
 - (iv) Mention the value associated with the use of a specific polymer.
- Q. 4.** PHBV (poly- β -hydroxybutyrate-co- β -hydroxyvalerate) is a biodegradable polymer. It is a co-polymer of 3-hydroxybutanoic acid and 3-hydroxy pentanoic acid.
- (i) How has PHBV found utility in medicines as capsule ?
 - (ii) Write the name of polymer used in artificial limb popularly known as Jaipur foot.
 - (iii) Is this polymer an addition polymer or condensation polymer ?
 - (iv) Write the values associated with the use of PHBV.
- Q. 5.** Vidhi's mother followed a very traditional way of cooking using earthenwares, copper utensils etc. Her daughter replaced all the kitchen steel utensils with teflon coated ones.
- (i) In your opinion, who is correct in present situation ?
 - (ii) Give monomer of teflon. Is it an addition or a condensation polymer ?
 - (iii) Write the structure of teflon.
 - (iv) Mention the values shown by Vidhi.

UNIT 16

CHEMISTRY IN EVERYDAY LIFE

Points to Remember

- 1. Drugs :** Drugs are chemical of low molecular masses, which interact with macromolecular targets and produce a biological response.
- 2. Chemotherapy :** The use of chemicals for therapeutic effect is called chemotherapy.
- 3. Classification of Drugs :**
 - (i) On the basis of pharmacological effect :** Drugs for a particular type of problem as analgesics for pain relieving.
 - (ii) On the basis of drug action :** Action of drug on a particular biochemical process.
 - (iii) On the basis of chemical action :** Drugs having similar structure, *e.g.*, sulpham drugs.
 - (iv) On the basis of molecular targets :** Drugs interacting with biomolecules as lipids, proteins.
- 4. Enzymes as Drug Targets :**
 - (i) Catalytic action of enzymes :**
 - (a) Enzymes have active sites which hold the substrate molecule. It can be attracted by reacting molecules.
 - (b) Substrate is bonded to active sites through hydrogen bonds, ionic bonds, van der Waal or dipole-dipole interactions.
 - (ii) Drug-enzyme interactions :**
 - (a) Drug compete with natural substrate for their attachments on the active sites of enzymes. They are called competitive inhibitors.
 - (b) Some drugs binds to a different site of the enzyme called allosteric sites which changes the shape of active sites.
- 5. Antagonists :** The drugs that bind to the receptor site and inhibit its natural function.

6. **Agonists** : Drugs mimic the natural messenger by switching on the receptor.
7. **Antacids** : These are compounds which neutralize excess acid of stomach. *E.g.*, Aluminium hydroxide, magnesium hydroxide.
8. **Anti Histamines** : The drugs which interfere with the natural action of histamines and prevent the allergic reaction. *E.g.*, Rantidine, tegarnet, avil.
9. **Tranquilizers** : The class of chemical compounds used for the treatment of stress, mild or even severe mental diseases. *E.g.*, Idardil, iproniagid, luminal, seconil equanil.
10. **Analgesics** : They reduce pain without causing impairment of consciousness, mental confusion or some other disturbance of the nervous system. *E.g.*, Aspirin, seridon, phenacetin.
11. **Antimicrobials** : They tend to prevent/destroy or inhibit the pathogenic action of microbes as bacteria, virus, fungi etc. They are classified as :
 - (i) **Antibiotics** : Those are the chemical substances which are produced by micro-organisms. *E.g.*, Penicillin, Ofloxacin.

Narrow spectrum antibiotics : These are effective mainly against gram positive or gram negative bacteria. *E.g.*, Penicillin, streptomycin.

Broad spectrum antibiotics : They kill or inhibit a wide range of micro-organisms. *E.g.*, Chloramphenicol, tetracycline.
 - (ii) **Antiseptics or Disinfectant** : These are which either kill/inhibit the growth of micro-organisms.

Antiseptics are applied to the living tissues such as wounds, cuts, ulcers etc. *E.g.*, Furacine, chloroxylenol and terpinol (dettol). Disinfectant are applied to inanimate objects such as floors, drainage system.

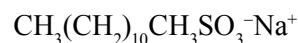
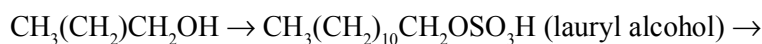
E.g., 0.2% solution of phenol is an antiseptic while 1% solution is an disinfectant.
12. **Antifertility drugs** : These are the chemical substances used to control the pregnancy. They are also called oral contraceptives or birth control pills. *E.g.*, Mifepristone, norethindrone.
13. **Artificial Sweetening Agents** : These are the chemical compounds which give sweetening effect to the food without adding calorie. They are good for diabetic people. *E.g.*, Aspartame, saccharin, alitame, sucrolose.
14. **Food Preservatives** : They prevents spoilage of food to microbial growth. *E.g.*, Salt, sugar and sodium benzoate.

15. Cleansing Agents :

- (i) **Soaps** : They are sodium or potassium salts of long chain fatty acids. They are obtained by the soapnification reaction, when fatty acids are heated with aqueous sodium hydroxide. They do not work well in hard water.
- (ii) **Toilet soaps** : That are prepared by using better grade of fatty acids and excess of alkali needs to be removed. Colour and perfumes are added to make them attractive.
- (iii) **Medicated soaps** : Substances or medicinal value are added. *E.g.*, Buthional, dettol.

16. Synthetic Detergents : They are cleaning agents having properties of soaps, but actually contain no soap. They can be used in both soft and hard water. They are :

- (i) **Anionic detergents** : They are sodium salts of sulphonated long chain alcohols or hydrocarbons. *E.g.*, Sodium lauryl sulphonate. They are effective in acidic solution.



(sodium lauryl sulphonate)

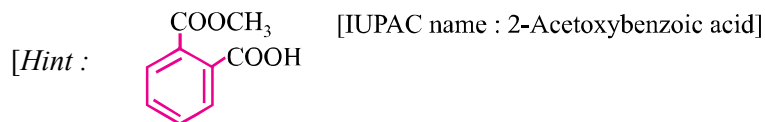
- (ii) **Cationic detergents** : They are quarternary ammonium salts of amines with acetates, chlorides or bromides. They are expensive used to limited extent. *E.g.*, Cetyltrimethylammonium bromide.
- (iii) **Non-ionic detergents** : They do not contain any ions. Some liquid dishwashing detergents are of non-ionic type.

17. Biodegradable Detergents : The detergents which are linear and can be attacked by micro-organisms are biodegradable. *E.g.*, Sodium 4-(1-dodecyl) benzene/sulphonate.

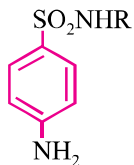
18. Non-biodegradable Detergents : The detergents which are branched and cannot be decomposed by micro-organisms are called non-biodegradable. *E.g.*, Sodium 4-(1, 3, 5, 7 tetramethyloctyl)-benzene sulphonate. It creates water pollution.

VERY SHORT ANSWER TYPE QUESTIONS (1 Mark)

Q. 1. Write the formula and IUPAC name of aspirin.



Q. 2. Name the type of drugs having following structural formula :



[Hint : Sulpha drugs]

Q. 3. Name two types of the drugs classified on the basis of pharmacological effect.

[Hint : Analgesics, Antiseptics.]

Q. 4. What is the role of Bithional in toilet soaps ?

[Hint : To impart antiseptic properties to soaps.]

Q. 5. Why is sodium benzoate added to packed containers of jams and pickles ?

[Hint : It prevents spoilage of jams and pickles due to microbial growth. It is a food preservative.]

Q. 6. Why the receptors embedded in cell membranes show selectivity for one chemical messenger over the other ?

[Hint : The active site of receptor has specific shape and specific functional groups which can bind only specific messenger which fits in.]

Q.7. With reference to which classification has the statement ‘Ranitidine is an antacid’ been given ?

[Hint : Classification based on pharmacological effect.]

Q.8. Give the name of medicine used for the treatment of syphilis.

[Hint : Salvarsan.]

Q.9. Give the composition of tincture of iodine.

[Hint : 2-3% solution of iodine in alcohol-water mixture.]

Q.10. How does aspirin act as analgesic ?

[Hint : Aspirin inhibits the synthesis of prostaglandins which cause pain.]

Q.11. Name the antiseptic agents present in dettol.

[Hint : Chloroxylenol and Terpineol.]

Q.12. What precaution should be taken before administering penicillin to a patient ?

[Hint : To confirm beforehand that the patient is not allergic to penicillin.]

Q.13.Explain why aspirin finds use in prevention of heart attacks ?

[Hint : Due to anti blood clotting activity.]

Q.14.Mention one use of drug meprobamate.

[Hint : Antidepressant drug.]

Q.15.Name the derivative of sucrose which tastes like sugar and can be safely used by weight conscious people.

[Hint : Sucrolose.]

Q.16.Why synthetic detergents are preferred over soaps for use in washing machines ?

[Hint : They work well even with hard water and not form any scum.]

Q.17.How is acidity cured with cimetidine ?

[Hint : Cimetidine prevents the interaction of histamines with the receptors present in stomach wall.]

Q.18.While antacids and antiallergic drugs interfere with the function of histamines, why do these not interfere with the function of each other ?

[Hint : Antacids and antiallergic drugs bind to the different receptor sites. Therefore, they do not interfere with the function of each other.]

Q.19.Which of the following two compounds can be used as a surface agent and why ?

[Hint : Compound (i) acts as a surface agent because its one end is hydrophobic while the other end is hydrophilic in nature.]

Q.20.What type of drug is chloramphenicol ?

[Hint : Bacteriostatic broad spectrum antibiotic.]

Q.21.Name a chemical used as an antiseptic as well as disinfectant.

[Hint : Phenol. (0.2% solution antiseptic and 1% solution disinfectant)]

Q.22.Give two examples of antidepressants.

[Hint : Iproniazid, Phenelzine.]

Q.23.Name the antioxidants commonly used to increase the storage of butter.

[Hint : BHA (Butylated Hydroxy anisole).]

Q.24. Give the name of medicine having – As = As – linkage.

[Hint : Arsphenamine.]

Q.25. Which antibiotic is supposed to be toxic towards certain strains of cancer cells ?

[Hint : Dysidazirine.]

Q.26. Name one antioxidant used in wine, butter and beers.

[Hint : BHA, BHT.]

Q.27. Hair shampoos belong to which class of synthetic detergent ?

[Hint : They belong to cationic detergents. E.g., Cetyltrimethyl-ammonium bromide.]

Q.28. Dishwashing soaps are synthetic detergents. What is their chemical nature ?

[Hint : They are non-ionic detergents. E.g., Polyethylene glycol-stearate.]

Q.29. What is the cause of a feeling of depression in human beings ? Name a drug which can be useful in treating depression.

[Hint : Low level of noradrenaline, a neurotransmitter causes depression in human beings. Antidepressant drugs are Iproniazid, Phenelzine.]

Q.30. Name a food preservative which is most commonly used by food producers.

[Hint : Sodium metabisulphite ($\text{Na}_2\text{S}_2\text{O}_5$).]

Q.31. Mention one use of drug Meprobamate.

[Hint : Antidepressant drug.]

Q.32. How is acidity cured with cimetidine or ranitidine ?

[Hint : Cimetidine or Ranitidine prevents the interaction of histamine with the receptors present in stomach walls and therefore, secretion of acid is prevented.]

Q.33. While antacids and antiallergic drugs interfere with the function of histamines, why do these not interfere with the function of each other ?

[Hint : Antacids and antiallergic drugs bind to the different receptor sites. Therefore, they do not interfere with the function of each other.]

SHORT ANSWER-I TYPE QUESTIONS (2 Marks)

Q. 1. What are antihistamines ? Give two examples.

[*Hint* : The group of compounds which destroy histamine produced in the body by allergens. *E.g.*, Bromopheniramine, seldane.]

Q. 2. What are narcotic and non-narcotic analgesics ? Give one example of each.

[*Hint* : Non-narcotics are the drugs which relieve or decrease pain without causing unconsciousness. Example, Aspirin.

Narcotics analgesics are those drugs which relieve pain, but produce sleep and unconsciousness. Example, Morphine.]

Q. 3. Explain the following terms as used in medicinal chemistry :

(i) **Target molecules** (ii) **Enzyme inhibitors**

[*Hint* : (i) Drugs that interact with biomolecules such as lipids, carbohydrates, proteins and nucleic acids, are called target molecules.

(ii) They inhibit the catalytic activity of the enzyme.]

Q. 4. Give one important use of each of the following :

(i) **Equanil** (ii) **Morphine**

[*Hint* : (i) Tranquilizer (antidepressant).

(ii) Narcotic analgesics]

Q. 5. What are neurologically active drugs ? Give two examples.

[*Hint* : Tranquilizers and analgesics are neurologically active drugs. Example : Equanil, morphine.]

Q. 6. (i) What are antibiotics ?

(ii) **What is meant by the term broad spectrum antibiotic ?**

[*Hint* : (i) A substance produced wholly or partly by chemical synthesis which in low concentration inhibits the growth or destroys microorganism by interfering with their metabolic processes.

(ii) Antibiotics which kills or inhibits wide range of bacteria.]

Q. 7. From the given examples – ciprofloxacin, phenelzine, morphine, ranitidine – choose the drug used for :

- (i) treating allergic conditions (ii) to get relief from pain

[Hint : (i) Ranitidine (ii) Morphine]

Q. 8. Why a drug should not be taken without consulting a doctor ? Give two reasons.

[Hint : (i) To avoid side effects caused by drug.

(ii) To have the advice for proper dose of drug.]

Q. 9. State the main difference between bacteriostatic and bactericidal antibiotics. Give one example of each.

[Hint : Bacteriostatic antibiotics have inhibitory effect while bactericidal antibiotics have killing effect on microbes.

Example : Bacteriostatic antibiotic : Tetracycline

Bactericidal antibiotic : Ofloxacin]

Q.10. What are antifertility drugs ? Name the constituents of an oral contraceptive.

[Hint : Drugs used to check pregnancy in women to control birth rate. Oral contraceptives contains a mixture of synthetic estrogen and progesterone derivatives.]

Q.11. What do you mean by non-biodegradable detergents ? How can we make biodegradable detergents ?

[Hint : Detergents which cannot be degraded by nature. Biodegradable detergents can be prepared by minimizing the branching of the hydrocarbon chain, as unbranched chains can be biodegraded.]

Q.12. If water contains dissolved calcium hydrogencarbonate, which out of soap and detergent, will you prefer to use ? Why ?

[Hint : We will use detergent because it will not form insoluble precipitate with Ca^{2+} .]

Q.13. What are barbiturates ? What is the action of barbiturates on human body ?

[Hint : Barbituric acid derivatives are called barbiturates. They are highly effective pain relieving agents.]

Q.14. Write the structures of soaps obtained by the hydrolysis of the following fats :

(i) $(C_{15}H_{31}COO)_3C_3H_5$ **Glyceryl palmitate**

(ii) $(C_{17}H_{33}COO)_3C_3H_5$ **Glyceryl oleate**

[Hint : (i) $C_{15}H_{31}COO^-Na^+$ (ii) $C_{17}H_{33}COO^-Na^+$]

Q. 15. What are antagonists and agonists ?

[Hint : Drugs which bind to the receptor site and inhibits its natural function. They are useful when blocking of message is required.]

Agonists are the drugs which imitate (mimic) the natural messenger by switching on the receptor. They are useful when there is lack of natural chemical messenger.]

Q. 16. What is the advantage of using antihistamines over antacids in the treatment of acidity ?

[Hint : Antihistamines prevent the interaction of histamine with the receptors present in stomach wall and thus lesser amount of HCl is released.]

Q. 17. From the given examples – Promethazine, phenelzine, morphine, ranitidine – choose the drug used for :

(i) **treating allergic conditions** (ii) **to get relief from pain**

[Hint : (i) Ranitidine (ii) Morphine]

Q. 18. Write two side effects of Aspirin.

[Hint : (i) It is toxic to liver.

(ii) It also causes bleeding from stomach sometimes, thus it is a gastric irritant.]

Q. 19. What are sulpha drugs ? Give two examples.

[Hint : A group of drugs which are derivatives of sulphanilamide and are used in place of antibiotics is called sulpha drugs. E.g., sulphadiazine, sulphanilamide.]

Q. 20. What forces are involved in holding the active sites of enzymes ?

[Hint : The forces involved in holding the active sites of enzymes are hydrogen bonding, ionic bonding, dipole-dipole attractions or van der Waal's forces of attraction.]

SHORT ANSWER-II TYPE QUESTIONS (3 Marks)

Q. 1. (i) Why are artificial sweetening agents harmless when taken ?

(ii) **Name one such artificial sweetening agent.**

(iii) Why is the use of aspartame as an artificial sweetener limited to cold foods ?

[Hint : (i) Because they are not metabolized by body and excreted from the body in urine unchanged.

(ii) Aspartame.

(iii) Because it is unstable at cooking temperature.]

Q. 2. Pick out the odd one amongst the following on the basis of their medicinal properties. Give suitable reason :

(i) Luminal, seconal, terfenadine, equanil.

(ii) Chloroxylenol, phenol, chloamphenicol, bithional.

(iii) Sucralose, aspartame, alitame, sodium benzoate.

[Hint : (i) Terfenadine is antihistamine other three are used as tranquilizers.

(ii) Chloramphenicol is a broad spectrum antibiotic. Other three have antiseptic properties.

(iii) Sodium benzoate is a food preservative. Other three are artificial sweetners.]

Q. 3. Give the main function of following in the body of human beings :

(i) Enzymes

(ii) Receptor proteins

(iii) Neurotransmitter

[Hint : (i) Catalyse biochemical reactions.

(ii) Important for the communication system of the body.

(iii) They control mood changes in organisms.]

Q. 4. Identify the class of drug :

(i) Phenelzine (Nardin)

(ii) Aspirin

(iii) Cimetidine

[Hint : (i) Antidepressant drug (ii) Analgesics and antipyretic

(iii) Antihistamine]

Q. 5. Give the pharmacological function of the following type of drugs :

- (i) Analgesics (ii) Tranquilizers (iii) Antifertility drugs

[Hint : (i) Which reduce or abolish pain.

(ii) They are neurologically active drugs used to treat mental diseases.

(iii) Drugs used to check pregnancy in women to control birth rate.]

Q. 6. Give the name of medicine used in the treatment of following diseases :

(i) Typhoid

(ii) Joint pain (in Arthritis)

(iii) Hypertension

[Hint : (i) Antibiotics (ii) Non-narcotic analgesics (iii) Tranquilizers]

Q. 7. Give the class of drugs to which these substances belong :

- (i) Bithional (ii) Amoxycillin (iii) Salvarsan

[Hint : (i) Antiseptic (ii) Broad spectrum antibiotic

(iii) Antimicrobial (antibacterial)]

Q. 8. How are antiseptics different from disinfectants ? How does an antibiotic differ from these two ? Give one example of each of them.

[Hint : Antiseptics may kill or stop the growth of microbes and safe for living tissues, where an disinfectants kill microbes but not safe for living tissues. While antibiotic are produced by micro-organism, can inhibit the growth of other micro-organism.

Example : Antiseptic : 0.2% phenol, Disinfectant : 1% phenol, Antibiotic : Penicillin]

Q. 9. Explain the following terms with suitable examples :


(i) Cationic detergents

(ii) Anionic detergents

(iii) Non-ionic detergents

- [Hint : (i) Those in which cationic part of the molecule is involved in cleansing action. E.g., cetyltrimethyl ammonium bromide.
- (ii) Those in which anionic part of the molecule is involved in cleansing action. E.g., sodium laurylsulphate.
- (iii) Which do not contain any ion in their constitution. E.g., Lauryl alcohol ethoxylate.]

Q.10. Classify the following as cationic detergents, anionic detergents or non-ionic detergents :

- (i) $\text{CH}_3(\text{CH}_2)_{10}\text{CH}_2\text{OSO}_3^-\text{Na}^+$
- (ii) $[\text{CH}_3 - (\text{CH}_2)_{15}\text{N}(\text{CH}_3)_3]^+\text{Br}^-$
- (iii) C_9H_{10}  $\text{O}(\text{CH}_2\text{CH}_2\text{O})_n\text{CH}_2\text{CH}_2\text{OH}$

Where ($n = 5 - 10$)

- [Hint : (i) Anionic detergent (ii) Cationic detergent
(iii) Non-ionic detergent]

Q. 11. How do enzyme inhibitors work ? Distinguish between competitive and non-competitive enzyme inhibitors.

[Hint : An enzyme inhibitor either blocks the active site of enzyme or changes the shape of the active site by binding at an allosteric site. They are of two types :

- (i) Competitive enzyme inhibitor competes with natural substance for their attachment on the active sites of enzymes.
- (ii) Non-competitive enzyme inhibitor binds at allosteric site and changes the shape of the active site in such a way that the substrate cannot recognize it.]

Q. 12.(i) What class of drug is Ranitidine ?

(ii) If water contains dissolved Ca^{2+} ions, out of soaps and synthetic detergents, which will you use for cleaning clothes ?

(iii) Which of the following is an antiseptic :

0.2% phenol or 1% phenol

LONG ANSWER TYPE QUESTIONS (5 Marks)

Q. 1. (i) Discuss two ways in which drugs prevent the attachment of native substrate on active site of an enzyme.

- (ii) What are antibiotics ? Distinguish between narrow spectrum and broad spectrum antibiotics. Classify the following into bactericidal bacteriostatic antibiotics :

Tetracycline, Penicillin, Ofloxacin and Chloramphenicol.

- Q. 2.** What are detergents ? How are they classified ? Why are detergents usually preferred to soaps for washing clothes ? Give an example of detergents.

HOTS

- Q. 1.** Name two drugs which inhibit the action of enzyme which metabolise noradrenaline.

[Hint : Iproniazid and phenelzine.]

- Q. 2.** Which type of detergents will you use to formulate a toilet cleaner ? Explain why ?

[Hint : Cationic detergent, due to its germicidal properties.]

- Q. 3.** Name the antiseptic you will add to soap to make it useful for control of pimples.

[Hint : Bithional]

- Q. 4.** Name the chemical responsible for nasal congestion with common cold and allergic response to pollen.

[Hint : Histamine]

- Q. 5.** Name the important by-product of soap industry.

[Hint : Glycerol]

MATCHING TYPE QUESTIONS

- Q. 1.** Match the medicines given in Column I with their use given in Column II :

Column I	Column II
(i) Ranitidine	(a) Tranquilizer
(ii) Furacine	(b) Antibiotic
(iii) Phenelzine	(c) Antihistamine
(iv) Chloramphenicol	(d) Antiseptic
	(e) Antifertility drug

Q. 2. Match the soaps given in Column I with items given in Column II :

Column I	Column II
(i) Soap chips	(a) dried miniature soap bubbles
(ii) Soap granules	(b) small broken pieces of soap formed from melted soaps
(iii) Soap powder	(c) soap powder + abrasives + builders (Na_2CO_3 , Na_3PO_4)
(iv) Scouring soap	(d) soap powder + builders like Na_2CO_3 and Na_3PO_4)

Q. 3. Match structures given in Column I with the type of detergents given in Column II :

Column I	Column II
(i) $\text{CH}_3(\text{CH}_2)_{16}\text{COO}(\text{CH}_2\text{CH}_2\text{O})_n\text{CH}_2\text{CH}_2\text{OH}$	(a) Cationic detergent
(ii) $\text{C}_{17}\text{H}_{35}\text{COO}^-\text{Na}^+$	(b) Anionic detergent
(iii) $\text{CH}_3 - (\text{CH}_2)_{10}\text{CH}_2\text{SO}_3^-\text{Na}^+$	(c) Non-ionic detergent
(iv) $\left[\text{CH}_3(\text{CH}_2)_{15} - \overset{\text{CH}_3}{\underset{\text{CH}_3}{\text{N}}} - \text{CH}_3 \right]^+ \text{Br}^-$	(d) Soap

Q. 4. Match the detergents given in Column I with their uses given in Column II :

Column I	Column II
(i) $\left[\text{CH}_3(\text{CH}_2)_{15} - \overset{\text{CH}_3}{\underset{\text{CH}_3}{\text{N}}} - \text{CH}_3 \right]^+ \text{Br}^-$	(a) Dishwashing powder
(ii) $\text{CH}_3 - (\text{CH}_2)_{11} - \text{C}_6\text{H}_4 - \text{SO}_3^-\text{Na}^+$	(b) Laundry soap
(iii) $\text{C}_{17}\text{H}_{35}\text{COO}^-\text{Na}^+ + \text{Na}_2\text{CO}_3 + \text{Rosin}$	(c) Hair conditioners
(iv) $\text{CH}_3(\text{CH}_2)_{16}\text{COO}(\text{CH}_2\text{CH}_2\text{O})_n\text{CH}_2\text{CH}_2\text{OH}$	(d) Toothpaste

Q. 5. Match the class of compounds given in Column I with their functions given in Column II :

Column I	Column II
(i) Antagonists	(a) Communicate message between two neurons and that between neurons to muscles
(ii) Agonists	(b) Bind to the receptor site and inhibit its natural function
(iii) Chemical messenger	(c) Crucial to body's communication process
(iv) Inhibitors	(d) Mimic the natural messenger
(v) Receptors	(e) Inhibit activities of enzymes

Q. 6. Match the classes of drugs given in Column I with their action given in Column II :

Column I	Column II
(i) Analgesics	(a) Inhibit the growth of micro-organisms, can be given orally
(ii) Antiseptics	(b) Treatment of stress
(iii) Antihistamines	(c) Applied to inanimate objects
(iv) Antacids	(d) Prevents the interaction of histamine with its receptor
(v) Tranquilisers	(e) Pain killing effect
(vi) Antibiotics	(f) Applied to diseased skin surfaces
(vii) Disinfectants	(g) Treatment of acidity

ANSWERS

- | | | | | | |
|----|-----------|------------|-------------|------------|-----------------------------|
| 1. | (i) – (c) | (ii) – (d) | (iii) – (a) | (iv) – (b) | |
| 2. | (i) – (b) | (ii) – (a) | (iii) – (d) | (iv) – (c) | |
| 3. | (i) – (c) | (ii) – (d) | (iii) – (b) | (iv) – (a) | |
| 4. | (i) – (c) | (ii) – (d) | (iii) – (b) | (iv) – (a) | |
| 5. | (i) – (b) | (ii) – (d) | (iii) – (a) | (iv) – (e) | (v) – (c) |
| 6. | (i) – (e) | (ii) – (f) | (iii) – (d) | (iv) – (g) | (v) – (b) |
| | | | | | (vi) – (a) (vii) – (c) |

MULTIPLE CHOICE QUESTIONS

1. Which is the correct statement about birth and control pills ?
- (a) Contain estrogen only (b) Contain progesterone only
- (c) Progesterone increases ovulation (d) Contains a mixture of estrogen & progesterone derivatives

Ans. (d)

2. Which of the following is used for the treatment of tuberculosis ?
- (a) Penicillin (b) Aspirin
- (c) Chloamphenicol (d) Streptomycin

Ans. (d)

3. Glycerol is added to soap. Its function is :
- (a) As a filler (b) To increase lathering
- (c) To prevent rapid drying (d) To make soap granules

Ans. (c)

4. Which of the following is not a target molecule for drug function in body ?
- (a) Vitamins (b) Lipids
- (c) Carbohydrates (d) Proteins

Ans. (a)

5. Which of the following can act as an antiseptic as well as disinfectant ?
- (a) Aspirin (b) Chlorine
- (c) Phenol (d) Dettol

Ans. (b)

VALUE BASED QUESTIONS (4 Marks)

Q. 1. Ram's father recovered from a heart attack. The doctor gave him Aspirin.

- (i) Why was Aspirin prescribed by the doctor ?
- (ii) What is the IUPAC name of Aspirin ?

(iii) After some time, he started to develop some ache in stomach. Then his wife gave him some butter milk. Why ?

(iv) What values do you get from this ?

Q. 2. Harish was feeling headache. His friend, Vikram observed that Harish had fever. He advised him to take two tablets of ofloxacin 200 mg but his sister, a XII class Chemistry student, advised her brother to go to family doctor.

(i) Is it right to take medicine as per you friend's advice ?

(ii) Write the values shown by his sister.

(iii) The doctor prescribed Harish to take paracetamol tablets for three days after taking food and advised rest.

(iv) Is this medicine an antibiotic or antipyretic ?

SOLVED SAMPLE PAPER-1

CHEMISTRY-XII (Theory)

Time allowed : 3 hours

Maximum Marks : 70

निर्धारित समय : 3 घण्टे

अधिकतम अंक : 70

General Instructions :

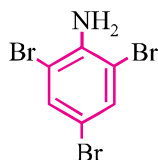
- All questions are compulsory.
- Question numbers 1 to 5 are very short answer questions and carry 1 mark each.
- Question numbers 6 to 10 are short answer questions and carry 2 marks each.
- Question numbers 11 to 22 are also short answer questions and carry 3 marks each.
- Question number 23 is a value based question and carry 4 marks.
- Questions number 24 to 26 are long answer questions and carry 5 marks each.
- Use log tables, if necessary. Use of calculators is not allowed.

सामान्य निर्देश :

- सभी प्रश्न अनिवार्य हैं।
- प्रश्न संख्या 1 से 5 तक अतिलघु उत्तरीय प्रश्न हैं और प्रत्येक प्रश्न के लिए 1 अंक है।
- प्रश्न संख्या 6 से 10 तक लघु उत्तरीय प्रश्न हैं और प्रत्येक प्रश्न के लिए 2 अंक हैं।
- प्रश्न संख्या 11 से 22 तक भी लघु उत्तरीय प्रश्न हैं और प्रत्येक प्रश्न के लिए 3 अंक हैं।
- प्रश्न संख्या 23 मूल्याधारित प्रश्न है और इसके लिए 4 अंक हैं।
- प्रश्न संख्या 24 से 26 तक दीर्घ उत्तरीय प्रश्न हैं और प्रत्येक प्रश्न के लिए 5 अंक हैं।
- यदि आवश्यकता हो तो लॉग टेबलों का प्रयोग करें। कैलकुलेटर्स के उपयोग की अनुमति नहीं है।

1. Write the IUPAC name of the given compound :

दिए गए यौगिक का आई. यू. पी. ए. सी. नाम लिखिए :



2. Write the main reason for the stability of colloidal sols.
कोलॉइडी सॉल की स्थिरता के लिए मुख्य कारण लिखिए।
3. Out of $\text{CH}_3-\underset{\text{CH}_3}{\text{CH}}-\text{CH}_2-\text{Cl}$ and $\text{CH}_3-\text{CH}_2-\overset{\text{CH}_3}{\text{CH}}-\text{Cl}$, which is more reactive towards

$\text{S}_\text{N}1$ reaction and why ?

$\text{CH}_3-\underset{\text{CH}_3}{\text{CH}}-\text{CH}_2-\text{Cl}$ और $\text{CH}_3-\text{CH}_2-\overset{\text{CH}_3}{\text{CH}}-\text{Cl}$, में से कौन $\text{S}_\text{N}1$ अभिक्रिया के प्रति अधिक सक्रिय है और क्यों ?

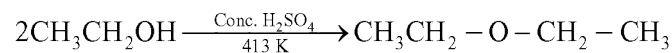
4. On adding NaOH to ammonium sulphate, a colourless gas with pungent odour is evolved which forms a blue coloured complex with Cu^{2+} ion. Identify the gas.
अमोनियम सल्फेट में NaOH के डालने पर एक रंगहीन गैस तीखी गंध के साथ निकलती है जो Cu^{2+} आयन के साथ नीले रंग का कॉम्प्लेक्स बनाती है। इस गैस की पहचान कीजिए।
5. What type of magnetism is shown by a substance if magnetic moments of domains are arranged in same direction ?
यदि चुम्बकीय विभव समान दिशाओं में व्यवस्थित हो, तो यह किस प्रकार का चुम्बकत्व दर्शाता है ?
6. For a reaction : $2\text{NH}_3(\text{g}) \xrightarrow{\text{Pd}} \text{N}_2(\text{g}) + 3\text{H}_2(\text{g})$
Rate = k

- (i) Write the order and molecularity of this reaction.
(ii) Write the unit of k.

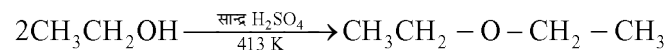
एक अभिक्रिया : $2\text{NH}_3(\text{g}) \xrightarrow{\text{Pd}} \text{N}_2(\text{g}) + 3\text{H}_2(\text{g})$ के लिए दर = k

- (i) अभिक्रिया की कोटि और अणुता
(ii) k का यूनिट लिखिए।

7. Write the mechanism of the following reaction :



निम्न अभिक्रिया की क्रियाविधि लिखिए :



8. From the given cells :

Lead storage cell, Mercury cell, Fuel cell and Dry cell

Answer the following :

- (i) Which cell is used in hearing aids ?
(ii) Which cell was used in Apollo Space Programme ?

(iii) Which cell is used in automobiles and inverters ?

(iv) Which cell does not have long life ?

निम्न सेलों के लिए :

लेड स्टोरेज सेल, मर्करी सेल, ईंधन सेल और शुष्क सेल

निम्न उत्तर दीजिए :

- (i) सुनने की सहायता के लिए किस सेल का उपयोग होता है ?
- (ii) अपोलो स्पेस प्रोग्राम में कौन-सी सेल का उपयोग किया गया था ?
- (iii) ऑटोमोबाइल और इनवर्टर में किस सेल का उपयोग होता है ?
- (iv) किस सेल की लाइफ लम्बी नहीं होती है ?

9. When chromite ore FeCr_2O_4 is fused with NaOH in presence of air, a yellow coloured compound (A) is obtained which on acidification with dilute sulphuric acid gives a compound (B). Compound (B) on reaction with KCl forms a orange coloured crystalline compound (C).

- (i) Write the formulae of the compounds (A), (B) and (C).
- (ii) Write one use of compound (C).

OR

Complete the following chemical equations :

- (i) $8\text{MnO}_4^- + 3\text{S}_2\text{O}_3^{2-} + \text{H}_2\text{O} \rightarrow$
- (ii) $\text{Cr}_2\text{O}_7^{2-} + 3\text{Sn}^{2+} + 14\text{H}^+ \rightarrow$

जब वायु में क्रोमाइट अयस्क FeCr_2O_4 को NaOH के साथ मिलाया जाता है, तो एक पीले रंग का यौगिक (A) प्राप्त होता है जिसका तनु सल्फ्यूरिक अम्ल के साथ अम्लीकरण करने पर यौगिक (B) प्राप्त होता है। यौगिक (B) की KCl के साथ अभिक्रिया होने पर एक नारंगी रंग का क्रिस्टली यौगिक (C) प्राप्त होता है।

- (i) यौगिक (A), (B) और (C) के सूत्र लिखिए।
- (ii) यौगिक (C) का एक उपयोग लिखिए।

अथवा

निम्न रासायनिक समीकरणों को पूरा कीजिए :

- (i) $8\text{MnO}_4^- + 3\text{S}_2\text{O}_3^{2-} + \text{H}_2\text{O} \rightarrow$
- (ii) $\text{Cr}_2\text{O}_7^{2-} + 3\text{Sn}^{2+} + 14\text{H}^+ \rightarrow$

10. When a co-ordination compound $\text{CrCl}_3 \cdot 6\text{H}_2\text{O}$ is mixed with AgNO_3 , 2 moles of AgCl are precipitated per mole of the compound. Write :

- (i) Structural formula of the complex.
- (ii) IUPAC name of the complex.

जब एक उपसहसंयोजन यौगिक $\text{CrCl}_3 \cdot 6\text{H}_2\text{O}$ को AgNO_3 के साथ मिलाया जाता है, तब यौगिक के एक मोल पर AgCl के दो मोल अवक्षेपित होते हैं। लिखिए :

- (i) कॉम्प्लेक्स का संरचना सूत्र
 - (ii) कॉम्प्लेक्स का आई यू पी ए सी नाम
11. (i) Differentiate between adsorption and absorption.
- (ii) Out of MgCl_2 and AlCl_3 , which one is more effective in causing coagulation of negatively charged sol and why ?
- (iii) Out of sulphur sol and proteins, which one forms multimolecular colloids ?
- (i) अधिशोषण और शोषण में अंतर कीजिए।
 - (ii) MgCl_2 और AlCl_3 में कौन ऋणात्मक चार्ज के सॉल का संगुणन अधिक प्रभावशाली ढंग से करेगा और क्यों ?
 - (iii) सल्फर सॉल और प्रोटीनों में से कौन बहुआणविक कोलॉइड बनाता है ?
12. (i) Name the method of refining of metals such as Germanium.
- (ii) In the extraction of Al, impure Al_2O_3 is dissolved in conc. NaOH to form sodium aluminate and leaving impurities behind. What is the name of this process ?
- (iii) What is the role of coke in the extraction of iron from its oxides ?
- (i) जर्मेनियम जैसी धातु के परिष्करण की विधि का नाम दीजिए।
 - (ii) Al के निष्कर्षण में अशुद्ध Al_2O_3 को सान्द्र NaOH में घुलाया जाता है जिससे सोडियम ऐलुमीनेट बनता है और अशुद्धियाँ पीछे रह जाती हैं। इस विधि का क्या नाम है ?
 - (iii) ऑक्साइड अयस्क से आयरन के निष्कर्षण में कोक की क्या भूमिका होती है ?
13. Calculate e.m.f. of the following cell at 298 K :
- $$2\text{Cr}(\text{s}) + 3\text{Fe}^{2+}(0.1\text{ M}) \rightarrow 2\text{Cr}^{3+}(0.01\text{M}) + 3\text{Fe}(\text{s})$$
- Given : $E^\circ(\text{Cr}^{3+}|\text{Cr}) = -0.74\text{ V}$, $E^\circ(\text{Fe}^{2+}|\text{Fe}) = -0.44\text{ V}$
- 298 K पर निम्न सेल का e.m.f. परिकल्पित कीजिए :
- $$2\text{Cr}(\text{s}) + 3\text{Fe}^{2+}(0.1\text{ M}) \rightarrow 2\text{Cr}^{3+}(0.01\text{M}) + 3\text{Fe}(\text{s})$$
- दिया गया है : $E^\circ(\text{Cr}^{3+}|\text{Cr}) = -0.74\text{ V}$, $E^\circ(\text{Fe}^{2+}|\text{Fe}) = -0.44\text{ V}$
14. Give reasons :
- (i) C-Cl bond length in chlorobenzene is shorter than C-Cl bond length in $\text{CH}_3\text{-Cl}$.

- (ii) The dipole moment of chlorobenzene is lower than that of cyclohexyl chloride.
- (iii) S_N1 reactions are accompanied by racemization in optically active alkyl halides.

कारण दीजिए :

- (i) क्लोरोबेन्जीन में C-Cl आबन्ध की लम्बाई CH_3-Cl में C-Cl आबन्ध की लम्बाई से कम है।
- (ii) क्लोरोबेन्जीन का द्विध्रुवी विभव साइक्लोहेक्सिल क्लोराइड के द्विध्रुवी विभव से निम्नतर है।
- (iii) प्रकाशकीय सक्रिय ऐल्किल हैलाइडों में S_N1 अभिक्रियाएँ रेसिमिकरण के साथ होती हैं।
15. An element crystallizes in a fcc lattice with cell edge of 250 pm. Calculate the density if 300 g of this element contain 2×10^{24} atoms.

कोई तत्व 250 pm कोष्टिका कोर के साथ किसी f.c.c. जालक में क्रिस्टलीकृत होता है। यदि इस तत्व के 300 g में 2×10^{24} परमाणु हैं, तो घनत्व परिकलित कीजिए।

16. The rate constant for the first order decomposition of H_2O_2 is given by the following equation :

$$\log k = 14.2 - \frac{1.0 \times 10^4}{T} K$$

Calculate E_a for this reaction and rate constant k if its half-life period be 200 minutes.

(Given : $R = 8.314 \text{ JK}^{-1} \text{ mol}^{-1}$)

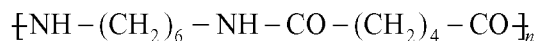
H_2O_2 के प्रथम कोटि वियोजन के लिए दर सिथरांक निम्न समीकरण द्वारा दिया जाता है :

$$\log k = 14.2 - \frac{1.0 \times 10^4}{T} K$$

यदि इसकी अर्ध-आयु 200 मिनट हो, तो इस अभिक्रिया के लिए E_a और दर सिथरांक k का परिकलन कीजिए।

(दिया गया है : $R = 8.314 \text{ JK}^{-1} \text{ mol}^{-1}$)

17. (i) What is the role of t-butyl peroxide in the polymerization of ethane ?
- (ii) Identify the monomers in the following polymer :



- (iii) Arrange the following polymers in the increasing order of their intermolecular forces :

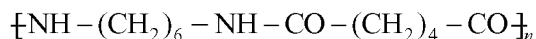
Polystyrene, Terylene, Buna-S

OR

Write the mechanism of free radical polymerization of ethene.

(i) एथीन के बहुलकीकरण में t-ब्यूटिल परॉक्साइड की क्या भूमिका होती है ?

(ii) निम्न बहुलक में एकलक की पहचान कीजिए :



(iii) निम्न बहुलकों को उनके अंतराणवक बल के बढ़ते क्रम में व्यवस्थित कीजिए :

पॉलिस्टीरीन, टेरिनील, ब्यूना-S

अथवा

एथीन के फ्री रेडिकल बहुलकीकरण की क्रियाविधि लिखिए।

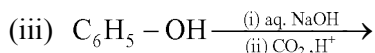
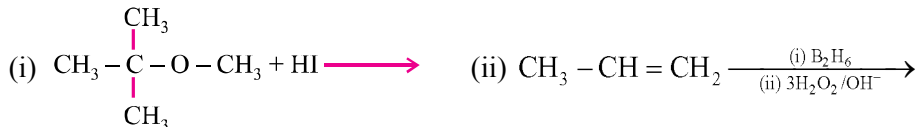
18. (i) Write the name of two monosaccharides obtained on hydrolysis of lactose sugar.
- (ii) Why Vitamin C cannot be stored in our body ?
- (iii) What is the difference between a nucleoside and nucleotide ?
- (i) दो मोनोसैकैराइडों के नाम लिखिए जो लैक्टोस शुगर के जल-अपघटन से प्राप्त होते हैं।
- (ii) विटामिन C हमारे शरीर में क्यों संचित नहीं किया जा सकता है ?
- (iii) एक न्यूक्लिओसाइड और न्यूक्लिओटाइड में क्या अंतर है ?
19. (i) For the complex $[\text{Fe}(\text{CN})_6]^{3-}$, write the hybridisation type, magnetic character and spin nature of the complex. (At. number : Fe = 26)
- (ii) Draw one of the geometrical isomers of the complex $[\text{Pt}(\text{en})_2\text{Cl}_2]^{2+}$ which is optically active.
- (i) कॉम्प्लेक्स $[\text{Fe}(\text{CN})_6]^{3-}$ के लिए संकरण प्रकार, चुम्बकीय व्यवहार और स्पिन स्वभाव लिखिए। (प. संख्या : Fe = 26)
- (ii) कॉम्प्लेक्स $[\text{Pt}(\text{en})_2\text{Cl}_2]^{2+}$ के उस एकलक को लिखिए जो प्रकाशकीय सक्रिय है।
20. Give reasons :
- (i) Mn shows the highest oxidation state of + 7 with oxygen but with fluorine it shows the highest oxidation state of + 4.
- (ii) Transition metals show variable oxidation states.
- (iii) Actinoids show irregularities in their electronic configurations.

कारण दीजिए :

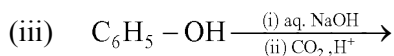
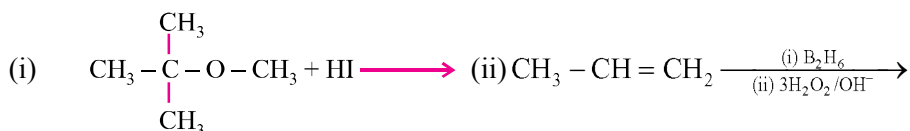
- (i) Mn ऑक्सीजन के साथ उपचयन अवस्था + 7 दर्शाता है, परन्तु फ्लुओरीन के साथ यह + 4 ही रहता है।

- (ii) संक्रमण धातुएँ विविध उपचयन अवस्थाएँ दर्शाती हैं।
 (iii) ऐक्टिनोयड अपने इलेक्ट्रॉनिक विन्यास में अनियमितता दर्शाते हैं।

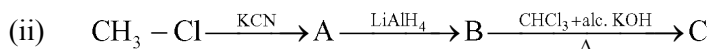
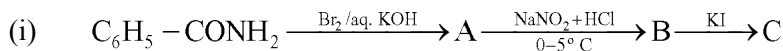
21. Write the main product(s) in each of the following reactions :



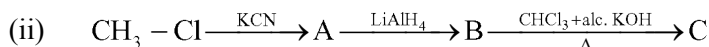
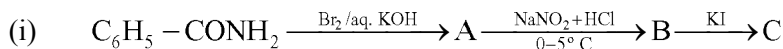
निम्न अभिक्रियाओं में प्रत्येक के मुख्य उत्पाद लिखिए :



22. Write the structures of A, B and C in the following :



निम्न में A, B और C की संरचनाएँ लिखिए :



23. Due to hectic and busy schedule, Mr. Angad made his life full of tensions and anxiety. He started taking sleeping pills to overcome the depression without consulting the doctor. Mr. Deepak, a close friend of Mr. Angad, advised him to stop taking sleeping pills and suggested to change his lifestyle by doing Yoga, meditation and some physical exercise. Mr. Angad followed his friend's advice and after few days he started feeling better.

After reading the above passage, answer the following :

- (i) What are the values (at least two) displayed by Mr. Deepak ?
 (ii) Why is it not advisable to take sleeping pills without consulting doctor ?
 (iii) What are tranquilizers ? Give two examples.

अत्यंत व्यस्तता के कारण मि. अंगद ने अपना जीवन तनावपूर्ण बना दिया था। उन्होंने तनाव पर कंट्रोल करने के लिए नींद की गोलीयाँ लेना शुरू कर दिया और इसके लिए डॉक्टर की सलाह नहीं ली। मि. अंगद के एक मित्र, मि. दीपक, ने उन्हें नींद की गोली न लेने की सलाह दी और सुझाव दिया कि वे अपनी जीवनचर्या में सुधार ले आवें और साथ ही उन्हें योगासन, ध्यान तथा व्यायाम आदि करने की सलाह दी। मि. अंगद ने अपने

मित्र की सलाह मानकर जीवनयापन में परिवर्तन किया और कुछ ही दिनों में बेहतर महसूस करने लगे।

उपरोक्त गद्यांश को पढ़कर निम्न के उत्तर दीजिए :

- (i) दीपक द्वारा किन मूल्यों (कम से कम दो) को दर्शाया गया है?
 - (ii) डॉक्टर की सलाह के बिना नौद की गोली क्यों नहीं लेनी चाहिए?
 - (iii) ट्रैक्वीलाइजर क्या हैं? दो उदाहरण दीजिए।
24. (a) Calculate the freezing point of solution when 1.9 g of MgCl_2 ($M = 95 \text{ g mol}^{-1}$) was dissolved in 50 g of water, assuming MgCl_2 undergoes complete ionization. (K_f for water = $1.86 \text{ K kg mol}^{-1}$)
- (b) (i) Out of 1 M glucose and 2 M glucose, which one has a higher boiling point and why?
 - (ii) What happens when the external pressure applied becomes more than the osmotic pressure of solution?

OR

- (a) When 2.56 g of sulphur was dissolved in 100 g of CS_2 , the freezing point lowered by 0.383 K. Calculate the formula of sulphur (S_x).
(K_f for $\text{CS}_2 = 3.83 \text{ K kg mol}^{-1}$, Atomic mass of Sulphur = 32 g mol^{-1})
 - (b) Blood cells are isotonic with 0.9% sodium chloride solution. What happens if we place blood cells in a solution containing :
 - (i) 1.2% sodium chloride solution?
 - (ii) 0.4% sodium chloride solution?
- (a) उस विलयन का हिमांक परिकलित कीजिए जिसके 50 g जल में 1.9 g of MgCl_2 ($M = 95 \text{ g mol}^{-1}$) घुला है, यह मानकर कि MgCl_2 पूर्णतः आयनीकृत है। (जल के लिए $K_f = 1.86 \text{ K kg mol}^{-1}$)
 - (b) (i) 1 M ग्लूकोस और 2 M ग्लूकोस में से किसका क्वथनांक उच्चतर है और क्यों?
 - (ii) क्या होता है जब विलयन के ऊपर लगाया गया बाह्य दाब परासरणी दाब से अधिक हो जाता है?

अथवा

- (a) जब 100 g CS_2 में 2.56 g सल्फर घुलाया जाता है, तो हिमांक 0.383 K कम हो जाता है। सल्फर (S_x) के सूत्र को परिकलित कीजिए।
(CS_2 के लिए $K_f = 3.83 \text{ K kg mol}^{-1}$, सल्फर का प. सं. = 32 g mol^{-1})
- (b) रक्त सेलों 0.9% सोडियम क्लोराइड विलयन के साथ आइसोटोनिक हैं। क्या होता है जब हम रक्त सेलों को एक विलयन में रखते हैं,

जिनमें :

- (i) 1.2% सोडियम क्लोराइड का विलयन हो ?
 - (ii) 0.4% सोडियम क्लोराइड का विलयन हो ?
25. (a) Account for the following :
- (i) Ozone is thermodynamically unstable.
 - (ii) Solid PCl_5 is ionic in nature.
 - (iii) Fluorine forms only one oxoacid HOF.
- (b) Draw the structure of :
- (i) BrF_5
 - (ii) XeF_4

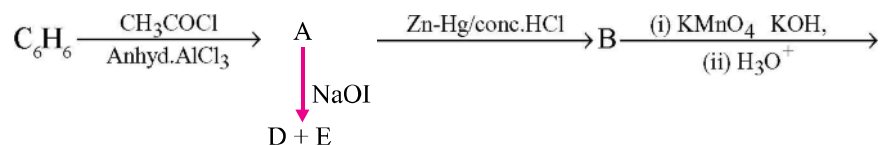
OR

- (i) Compare the oxidizing action of F_2 and Cl_2 by considering parameters such as bond dissociation enthalpy, electron gain enthalpy and hydration enthalpy.
 - (ii) Write the conditions to maximize the yield of H_2SO_4 by contact process.
 - (iii) Arrange the following in the increasing order of property mentioned :
 - (a) $\text{H}_3\text{PO}_3, \text{H}_3\text{PO}_4, \text{H}_3\text{PO}_2$ (Reducing character)
 - (b) $\text{NH}_3, \text{PH}_3, \text{AsH}_3, \text{SbH}_3, \text{BiH}_3$ (Base strength)
- (a) निम्न की कारण सहित व्याख्या कीजिए :
- (i) ओजोन ऊष्मागतिकीय असिधर है।
 - (ii) ठोस PCl_5 स्वभावतः आयनिक है।
 - (iii) फ्लुओरीन केवल एक ऑक्सोएसिड HOF बनाती है।
- (b) (i) BrF_5 (ii) XeF_4 की संरचनाएँ आरेखित कीजिए।

अथवा

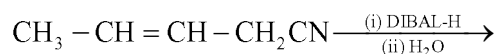
- (i) F_2 और Cl_2 की उपचायकी क्रिया की तुलना निम्न संदर्भों में कीजिए :
आबन्ध वियोजन एन्थैल्पी, इलेक्ट्रॉन प्राप्ति एन्थैल्पी और जल-अपघटन एन्थैल्पी।
- (ii) संस्पर्श प्रक्रम द्वारा H_2SO_4 के उत्पाद को अधिकतम बनाने के लिए शर्तें लिखिए।
- (iii) वर्णित गुणधर्म के आरोही क्रम में निम्नलिखित को व्यवस्थित कीजिए :
 - (a) $\text{H}_3\text{PO}_3, \text{H}_3\text{PO}_4, \text{H}_3\text{PO}_2$ (अपचयन लक्षण)
 - (b) $\text{NH}_3, \text{PH}_3, \text{AsH}_3, \text{SbH}_3, \text{BiH}_3$ (क्षार प्रबलता)

26. (a) Write the structures of A, B, C, D and E in the following reactions :



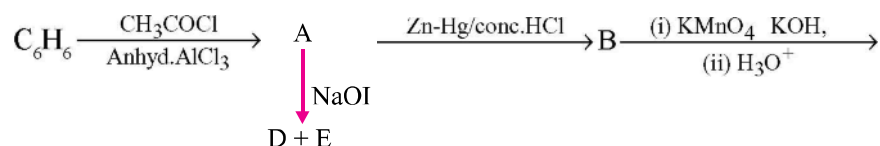
OR

- (a) Write the chemical equation for the reaction involved in Cannizzaro reaction.
- (b) Draw the structure of the semicarbazone of ethanol.
- (c) Why pKa of F – CH₂ – COOH is lower than that of Cl – CH₂ – COOH ?
- (d) Write the product in the following reaction :



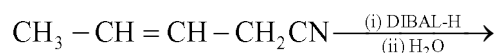
- (e) How can you distinguish between propanal and propanone ?

- (a) निम्न अभिक्रियाओं में A, B, C, D और E की संरचनाएँ लिखिए :



अथवा

- (a) कैनिजारो अभिक्रिया में होने वाली अभिक्रिया के लिए रासायनिक समीकरण को दीजिए।
- (b) एथेनॉल के सेमीकार्बेजोन की संरचना आरेखित कीजिए।
- (c) Cl – CH₂ – COOH की अपेक्षा F – CH₂ – COOH का pKa क्यों कम है ?
- (d) निम्न अभिक्रिया में उत्पाद को लिखिए :



- (e) प्रोपेनॉल और प्रोपेनोन के बीच अंतर कीजिए।

MARKING SCHEME-1

1. 2, 4, 6-Tribromoaniline/2, 4, 6-Tribromobenzenamine 1
2. Like charged particles cause repulsion/Brownian motion/Solvation 1
3. $\text{CH}_3\text{CH}_2\text{CH}(\text{Cl})\text{CH}_3$; secondary halide/ 2° carbocation is more stable. $\frac{1}{2}, \frac{1}{2}$
4. NH_3 1
5. Ferromagnetism 1
6. (i) Zero order, bimolecular/unimolecular $\frac{1}{2}, \frac{1}{2}$
 (ii) $\text{mol L}^{-1} \text{ s}^{-1}$ 1
7. (i) $\text{CH}_3-\text{CH}_2-\ddot{\text{O}}-\text{H} + \text{H}^+ \rightarrow \text{CH}_3-\text{CH}_2-\overset{\text{H}}{\underset{\text{H}}{\text{O}^+}}-\text{H}$ $\frac{1}{2}$
 (ii) $\text{CH}_3\text{CH}_2-\overset{\text{H}}{\underset{\text{H}}{\text{O}}} + \text{CH}_3-\text{CH}_2-\overset{\text{H}}{\underset{\text{H}}{\text{O}^+}} \rightarrow \text{CH}_3\text{CH}_2-\overset{\text{H}}{\underset{\text{H}}{\text{O}^+}}-\text{CH}_2\text{CH}_3 + \text{H}_2\text{O}$ 1
 (iii) $\text{CH}_3\text{CH}_2-\overset{\text{H}}{\underset{\text{H}}{\text{O}^+}}-\text{CH}_2\text{CH}_3 \rightarrow \text{CH}_3\text{CH}_2-\text{CH}_2\text{CH}_3 + \text{H}^+$ $\frac{1}{2}$
8. (i) Mercury cell $\frac{1}{2}$
 (ii) Fuel cell $\frac{1}{2}$
 (iii) Lead storage battery $\frac{1}{2}$
 (iv) Dry cell $\frac{1}{2}$
9. A : Na_2CrO_4 $\frac{1}{2}$
 B : $\text{Na}_2\text{Cr}_2\text{O}_7$ $\frac{1}{2}$
 C : $\text{K}_2\text{Cr}_2\text{O}_7$ $\frac{1}{2}$
 Use : Strong oxidizing agent/As a primary standard in volumetric analysis. $\frac{1}{2}$

OR

- $$8\text{MnO}_4^- + 3\text{S}_2\text{O}_3^{2-} + \text{H}_2\text{O} \rightarrow 8\text{MnO}_2 + 6\text{SO}_4^{2-} + 2\text{OH}^- \quad 1$$
- $$\text{Cr}_2\text{O}_7^{2-} + 14\text{H}^+ + 3\text{Sn}^{2+} \rightarrow 2\text{Cr}^{3+} + 3\text{Sn}^{4+} + 7\text{H}_2\text{O} \quad 1$$
10. (i) $[\text{Cr}(\text{H}_2\text{O})_5\text{Cl}]\text{Cl}_2 \cdot \text{H}_2\text{O}$ 1
 (ii) pentaquachlorido chromium(III) chloride monohydrate (or chloride hydrate) 1
 (No deduction for not writing hydrate)

11. (i)	Adsorption Surface phenomena The accumulation of molecular species at the surface rather than in the bulk of a solid or liquid is termed adsorption. (Any one difference)	Absorption Bulk phenomena The substance is uniformly distributed throughout the bulk of the solid essentially a bulk phenomenon.	1
(ii)	AlCl_3 , more positive charge/Hardy-Schulze rule		$\frac{1}{2} + \frac{1}{2}$
(iii)	Sulphur		1
12. (i)	Zone refining		1
(ii)	Leaching/Bayer's process		1
(iii)	Reducing agent/to form CO which acts as a reducing agent.		1
13.	$E_{\text{cell}}^0 = E_{\text{c}}^0 - E_{\text{a}}^0$ $= (-0.44) - (-0.74) \text{ V}$ $= 0.30 \text{ V}$		$\frac{1}{2}$
	$E_{\text{cell}} = E_{\text{cell}}^0 - \frac{0.059}{n} \log \frac{[\text{Cr}^{3+}]^2}{[\text{Fe}^{2+}]^3}$		$\frac{1}{2}$
	$E_{\text{cell}} = E_{\text{cell}}^0 - \frac{0.059}{6} \log \frac{[0.01]^2}{[0.1]^3}$ $= 0.30 - \left(-\frac{0.059}{6} \right)$ $= 0.3098 \text{ V}$		1
14. (i)	In chlorobenzene, each carbon atom is sp^2 hybridised/resonating structures/partial double bond character.		1
(ii)	Due to + R effect in chlorobenzene/difference in hybridization <i>i.e.</i> , sp^2 and sp^3 respectively/- I and + R effect oppose each other while - I effect is the only contributing factor in cyclohexane.		1
(iii)	Due to formation of planar carbocation/Carbon in carbocation formed is sp^2 hybridised.		1
15.	2×10^{24} atoms weigh = 300 g 6.022×10^{23} atoms weigh = $(300 \times 6.022 \times 10^{23})/2 \times 10^{24}$		1

$$= 90.3 \text{ g}$$

$$d = \frac{z \times M}{a^3 N_A}$$

$$= \frac{4 \times 90.3}{(250 \times 10^{-10})^3 \times N_0} \quad \frac{1}{2} + \frac{1}{2}$$

$$= 38.4 \text{ g cm}^{-3} \quad 1$$

(Or any other correct method)

16. $\log k = \log A - \frac{E_a}{2.303RT}$ 1/2

$$\frac{E_a}{2.303RT} = 1.0 \times 10^4 \text{ K/T}$$

$$E_a = 1.0 \times 10^4 \times 2.303 \times 8.314$$

$$= 191471.4 \text{ J/mol} \quad 1$$

$$t_{1/2} = \frac{0.693}{k} \quad \frac{1}{2}$$

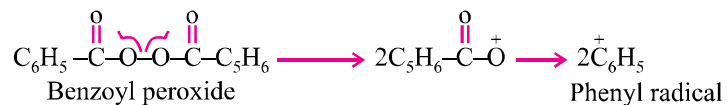
$$t_{1/2} = \frac{0.693}{k}$$

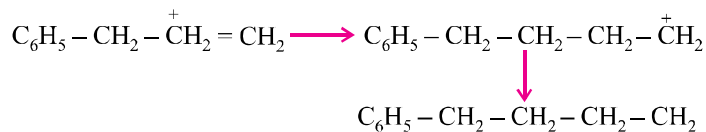
$$= 0.0034 \text{ min}^{-1} \quad 1$$

17. (a) Catalyst/initiator of free radical 1
 (b) Hexamethylene diamine and adipic acid/structure/IUPAC name 1/2, 1/2
 (c) Buna-S < polystyrene < Terylene 1

OR

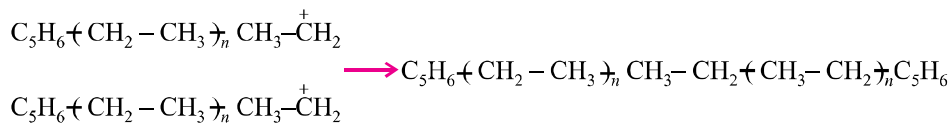
Chain initiation steps 1

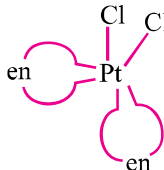
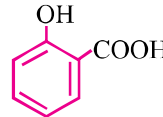




Chain terminating step

For termination of the long chain, these free radicals can combine in different ways to form polythene. One mode of termination of chain is shown as under.



- 1
18. (i) β -D glucose and β -D galactose/glucose and galactose 1/2, 1/2
- (ii) water soluble, excreted out of the body 1
- (iii) In nucleotide, phosphoric acid/phosphate group attached to the nucleoside/
structures of both nucleotide and nucleoside/nucleotide = base + sugar +
phosphate group, nucleoside = base + sugar. 1
19. d^2sp^3 , Paramagnetic, low spin 1, 1/2, 1/2
- 
- 1
20. (i) ability of oxygen to form multiple bond/p π -p π bond. 1
- (ii) Partially filled d-orbitals/due to comparable energies of ns and (n - 1)d orbitals. 1
- (iii) Due to relative stabilities of the f^0 , f^7 and f^{14} occupancies of the 5f orbitals/
comparable energies of 7s, 6d, 5f orbitals. 1
21. (i) CH_3OH , $(\text{CH}_3)_3\text{Cl}$ 1
- (ii) $\text{CH}_3\text{CH}_2\text{CH}_2\text{OH}$ 1
- (iii)  1
22. (i) $\text{C}_6\text{H}_5\text{NH}_2$, $\text{C}_6\text{H}_5\text{N}_2^+\text{Cl}^-$, $\text{C}_6\text{H}_5\text{I}$ 1/2 + 1/2 + 1/2
- (ii) CH_3CN , $\text{CH}_3\text{CH}_2\text{NH}_2$, $\text{CH}_3\text{CH}_2\text{NC}$ 1/2 + 1/2 + 1/2
23. (i) Aware, concerned or any other correct two values 1/2 + 1/2
- (ii) Side effects, unknown health problems 1

- (iii) Neurologically active drugs/stress relievers 1
 Example : valium, equanil (or any other two examples) $\frac{1}{2} + \frac{1}{2}$

24. (a)
$$\Delta T_f = i \times \frac{K_f \times W_b}{M_b \times W_a} \times 1000$$
 1

$$\Delta T_f = 3 \times \frac{1.86 \times 1.9}{95 \times 50} \times 1000$$

$$= 2.23 \text{ K} \quad 1$$

$$T_f - \Delta T_f = 273.15 - 2.23$$

$$T_f = 270.92 \text{ K or } 270.77 \text{ K} \quad 1$$

- (b) (i) 2M glucose; more number of particles/less vapour pressure $\frac{1}{2} + \frac{1}{2}$
 (ii) Reverse osmosis 1

OR

(a)
$$\Delta T_f = \frac{K_f \times W_b}{M_b \times W_a} \times 1000$$
 1

$$0.383 = \frac{3.83 \times 2.56}{M \times 100} \times 1000 \quad 1$$

$$M = 256$$

$$S \times x = 256$$

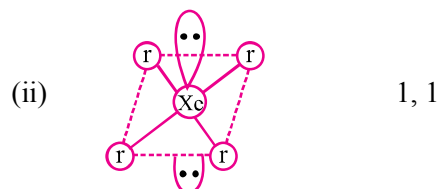
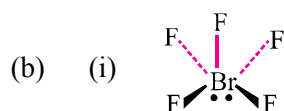
$$32 \times x = 256$$

$$x = 8 \quad 1$$

- (b) (i) Shrinks 1
 (ii) Swells 1

25. (a) (i) Endothermic compound/decomposition of ozone is exothermic in nature and ΔG is negative/decomposition of ozone is spontaneous. 1
 (ii) Exists as $[\text{PCl}_4]^+[\text{PCl}_6]^-$. 1

- (iii) Shows only - 1 oxidation state/most electronegative element/
absence of d-orbitals. 1



OR

- (i) F_2 is the stronger oxidizing agent than chlorine. $\frac{1}{2} \times 4 = 2$
- (a) low enthalpy of dissociation of F - F bond
- (b) less negative electron gain enthalpy of F
- (c) high hydration enthalpy of F^- ion
- (ii) low temperature, high pressure and presence of catalyst. 1
- (iii) (a) $H_3PO_4 < H_3PO_3 < H_3PO_2$ 1
- (b) $BiH_3 < SbH_3 < AsH_3 < PH_3 < NH_3$ 1
26. A : $C_6H_5COCH_3$ 1
- B : $C_6H_5CH_2CH_3$ 1
- C : C_6H_5COOH 1
- D, E : C_6H_5COONa, CHI_3 1 + 1

OR

- (a) $HCHO + HCHO \xrightarrow{\text{conc. NaOH}} HCOONa + CH_3OH$
(or any other example) 1
- (b) $CH_3CN = N - NHCONH_2$ 1
- (c) Stronger - I effect of fluorine, stronger acid less pka/strong electron
withdrawn power of fluorine. 1
- (d) $CH_3CH = CHCH_2CHO$ 1
- (e) Silver mirror is formed on adding ammoniacal silver nitrate to propanal and
not with propanone (or any other correct test) 1

SOLVED SAMPLE PAPER-2

CHEMISTRY-XII (Theory)

Time allowed : 3 hours

Maximum Marks : 70

निर्धारित समय : 3 घण्टे

अधिकतम अंक : 70

General Instructions :

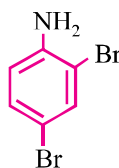
- (i) All questions are compulsory.
- (ii) Question numbers 1 to 5 are very short answer questions and carry 1 mark each.
- (iii) Question numbers 6 to 10 are short answer questions and carry 2 marks each.
- (iv) Question numbers 11 to 22 are also short answer questions and carry 3 marks each.
- (v) Question number 23 is a value based question and carry 4 marks.
- (vi) Questions number 24 to 26 are long answer questions and carry 5 marks each.
- (vii) Use log tables, if necessary. Use of calculators is not allowed.

सामान्य निर्देश :

- (i) सभी प्रश्न अनिवार्य हैं।
- (ii) प्रश्न संख्या 1 से 5 तक अतिलघु उत्तरीय प्रश्न हैं और प्रत्येक प्रश्न के लिए 1 अंक है।
- (iii) प्रश्न संख्या 6 से 10 तक लघु उत्तरीय प्रश्न हैं और प्रत्येक प्रश्न के लिए 2 अंक हैं।
- (iv) प्रश्न संख्या 11 से 22 तक भी लघु उत्तरीय प्रश्न हैं और प्रत्येक प्रश्न के लिए 3 अंक हैं।
- (v) प्रश्न संख्या 23 मूल्याधारित प्रश्न है और इसके लिए 4 अंक हैं।
- (vi) प्रश्न संख्या 24 से 26 तक दीर्घ उत्तरीय प्रश्न हैं और प्रत्येक प्रश्न के लिए 5 अंक हैं।
- (vii) यदि आवश्यकता हो तो लॉग टेबलों का प्रयोग करें। कैलकुलेटरों के उपयोग की अनुमति नहीं है।

1. Write the IUPAC name of the given compound :

निम्न यौगिक का आई. यू. पी. ए. सी. नाम लिखिए :



2. What type of magnetism is shown by a substance if its domains are arranged in equal number and in opposite directions ?

यदि किसी पदार्थ का डोमेन विपरीत दिशाओं में बराबर व्यवस्थित हो तो यह किस प्रकार का चुम्बकत्व दर्शाता है?

3. On heating Zn granules in conc. HNO_3 , a brown gas is evolved which undergoes dimerization on cooling. Identify the gas.

सांद्र HNO_3 के साथ जिंक कणिका को गर्म करने पर एक भूरे रंग की गैस निकलती है जिसका ठंडे होन पर द्विलकीकरण हो जाता है। इस गैस की पहचान कीजिए।

4. What is the reason for the stability of colloidal sols ?

कोलाइडी सॉल की स्थिरता का क्या कारण है?

5. Out of $\text{CH}_2 = \text{CH} - \text{CH}_2\text{Cl}$ and $\text{CH}_3 - \text{CH}_2 - \text{CH}_2\text{Cl}$, which is more reactive towards $\text{S}_\text{N}1$ reaction ?

$\text{CH}_2 = \text{CH} - \text{CH}_2\text{Cl}$ और $\text{CH}_3 - \text{CH}_2 - \text{CH}_2\text{Cl}$ में कौन $\text{S}_\text{N}1$ अभिक्रिया के लिए अधिक सक्रिय है?

6. When pyrolusite ore MnO_2 is fused with KOH in presence of air, a green coloured compound (A) is obtained which undergoes disproportionation reaction in acidic medium to give a purple coloured compound (B).

(i) Write the formulae of the compounds (A) and (B).

(ii) What happens when compound (B) is heated ?

जब पायरोलुसाइट अयस्क MnO_2 को KOH के साथ वायु की उपस्थिति में गलाया जाता है तब एक हरे रंग का यौगिक (A) प्राप्त होता है जिसकी अम्लीय माध्यम में असमानुपाती अभिक्रिया होने पर एक नील लोहित यौगिक (B) प्राप्त होगा :

(i) यौगिक (A) और (B) के सूत्र लिखिए।

(ii) क्या होता है जब यौगिक (B) तापित किया जाता है?

7. When a coordination compound $\text{PdCl}_2 \cdot 4\text{NH}_3$ is mixed with AgNO_3 , 2 moles of AgCl are precipitated per mole of the compound. Write :

(i) Structural formula of the complex

(ii) IUPAC name of the complex

जब एक उपसहसंयोजन यौगिक $\text{PdCl}_2 \cdot 4\text{NH}_3$ को AgNO_3 के साथ मिलाया जाता है तब 2 मोल AgCl यौगिक के एक मोल पर अवक्षेपित होता है। लिखिए :

(i) कॉम्प्लेक्स का संरचना सूत्र

(ii) कॉम्प्लेक्स का आई. यू. पी. ए. सी. नाम

8. For the given cells :

Lead storage cell, Mercury cell, Fuel cell and Dry cell

Answer the following :

- (i) Which cell is used in hearing aids ?
- (ii) Which cell was used in Apollo space programme ?
- (iii) Which cell is used in automobiles and invertors ?
- (iv) Which cell does not have long life ?

दिए गए सेलों के लिए :

लेड स्टोरेज सेल, मर्करी सेल, फ्यूल सेल और ड्राई सेल

निम्न के उत्तर दीजिए :

- (i) कौन सेल सुनने के लिए मशीन में काम आती है ?
- (ii) कौन सेल अपोलो स्पेस प्रोग्राम में प्रयुक्त हुई थी ?
- (iii) आटोमोबाइल और इनवर्टर में कौन सेल प्रयुक्त होती है ?
- (iv) कौन सेल अधिक दिन तक चलने वाली नहीं है ?

9. Write the chemical equations involved in the following reactions :

- (i) Clemmensen reduction
- (ii) Hell-Volhard Zelinsky reaction

OR

How do you convert :

- (i) Toluene to benzaldehyde
- (ii) Ethanoyl chloride to ethanol

निम्न अभिक्रियाओं से सम्बन्धित रासायनिक समीकरणों को लिखिए :

- (i) क्लीमेन्सेन अपचयन
- (ii) हेल-वोल्हार्ड जेलिंस्की अभिक्रिया

अथवा

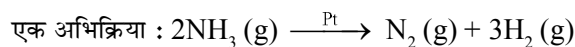
आप कैसे रूपांतरित करेंगे :

- (i) टॉलुइन को बेन्ज़ैल्डहाइड में
- (ii) एथेनोयल क्लोराइड का एथेनैल में

10. For a reaction : $2\text{NH}_3(\text{g}) \xrightarrow{\text{Pt}} \text{N}_2(\text{g}) + 3\text{H}_2(\text{g})$

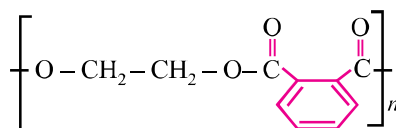
Rate = k

- (i) Write the order and molecularity of this reaction.
- (ii) Write the unit of k.



$$\text{दर} = k$$

- (i) इस अभिक्रिया की कोटि और आणविकता लिखिए।
 (ii) k का यूनिट लिखिए।
11. (i) What is the role of t-butyl peroxide in the polymerization of ethene ?
 (ii) Identify the monomers in the following polymer :



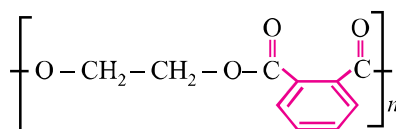
- (iii) Arrange the following polymers in the increasing order of their intermolecular forces :

PVC, Nylon-6, Buna-N

OR

Write the mechanism of free radical polymerization of ethene.

- (i) एथीन बहुलकीकरण में t-ब्यूटिल परऑक्साइड की क्या भूमिका है ?
 (ii) निम्न बहुलक में एकलक की पहचान कीजिए :



- (iii) निम्न बहुलकों को उनके अंतर्आणविक बल के बढ़ते क्रम में व्यवस्थित कीजिए :
 PVC, नायलान-6, बुना-N

अथवा

एथीन के फ्री रेडिकल बहुलकीकरण की क्रियाविधि को लिखिए।

12. The rate constant for the first order decomposition of H_2O_2 is given by the following equation :

$$\log k = 14.2 - \frac{1.0 \times 10^4 k}{T}$$

Calculate E_a for this reaction and rate constant k if its half-life period be 200 minutes. (Given : $R = 8.314 \text{ JK}^{-1} \text{ mol}^{-1}$)

H_2O_2 के प्रथम कोटि विघटन के लिए दर स्थिरांक निम्न समीकरण द्वारा दिया जाता है :

$$\log k = 14.2 - \frac{1.0 \times 10^4 k}{T}$$

इस अभिक्रिया के लिए E_a और दर स्थिरांक k परिकलित कीजिए यदि इसकी अर्ध-आयु 200 मिनट हो।
(दिया गया है : $R = 8.314 \text{ JK}^{-1} \text{ mol}^{-1}$)

13. Give reasons for the following :
- Aldehydes (R-CHO) are more reactive than ketones (R-CO-R) towards nucleophilic addition reaction.
 - Benzaldehyde does not undergo aldol condensation reaction.
 - Benzoic acid does not give Friedal-Crafts reaction.

निम्न के कारण दीजिए :

- न्यूक्लियोफिलिक योगात्मक अभिक्रियाओं के प्रति कीटोनों (R-CO-R) से अधिक ऐल्डिहाइडें (R-CHO) सक्रिय होती हैं।
 - बेन्जैलिडहाइड एल्डोल संघनन अभिक्रिया नहीं देता है।
 - बेन्जोइक अम्ल फ्राइडेल-क्रैफ्ट अभिक्रिया नहीं देता है।
14. (i) Out of silica gel and anhydrous $CaCl_2$, which will absorb the water vapours ?
(ii) Out of H_2SO_4 and H_3PO_4 , which one is more effective in causing coagulation of positively charged sol ? Give reason.
(iii) Out of sulphur sol and proteins, which one forms macromolecular colloids ?
- सिलिका जेल और निर्जल $CaCl_2$ में से कौन जल वाष्प का अधिक अवशोषण करेगा ?
 - धनात्मक आवेशित सॉल के स्कन्दन करने में H_2SO_4 और H_3PO_4 में से कौन अधिक प्रभावशाली है ? कारण दीजिए।
 - सल्फर सॉल और प्रोटीन में कौन मैक्रोमाल्युकुलर कौलाइड बनाता है ?

15. Give reasons :
- Mn shows the highest oxidation state of + 7 with oxygen but with fluorine it shows the highest oxidation state of + 4.
 - Zn is soft whereas Cr is hard.
 - Eu^{2+} is a good reducing agent.

कारण लिखिए :

- Mn ऑक्सीजन के साथ उपचयन अवस्था + 7 दर्शाता है, परन्तु फ्लुओरीन के साथ यह + 4 ही रहता है।
- Zn कोमल है जबकि Cr कठोर है।
- Eu^{2+} एक अच्छा अपचायी एजेंट है।

16. What happens when :

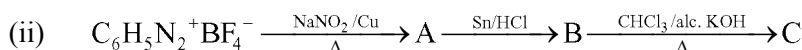
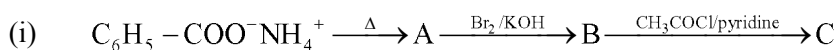
- 2, 4, 6-trinitrochlorobenzene is treated with warm water.
- 2-chlorobutane is treated with alcoholic KOH.
- Ethyl chloride is treated with Na metal in presence of dry ether.

Write the equation involved in the above reactions.

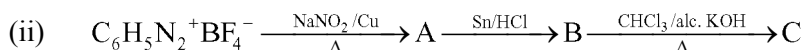
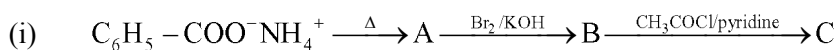
क्या होता है जब :

- 2, 4, 6-ट्राईनाइट्रोक्लोरोबेन्जीन गर्म जल के साथ उपचारित की जाती है।
 - 2-क्लोरोब्यूटेन को एल्कोहली KOH के साथ उपचारित किया जाता है।
 - सूखे ईथर की उपस्थिति में Na धातु के साथ एथिल क्लोराइड को उपचारित किया जाता है।
- उपरोक्त अभिक्रियाओं से सम्बन्धित समीकरणों को लिखिए।

17. Complete the following reactions :



निम्न अभिक्रियाओं को पूर्ण कीजिए :



18. (i) Write the name of two monosaccharides obtained on hydrolysis of maltose sugar.

(ii) Name the vitamin whose deficiency causes convulsions.

(iii) Write one example each for Fibrous protein and Globular protein.

(i) माल्टोस शुगर के जल अपघटन से प्राप्त दो मोनोसैकराइडों के नाम लिखिए।

(ii) उस विटामिन का नाम लिखिए जिसकी कमी से कनवल्शन हो जाता है।

(iii) रेशेदार प्रोटीन और गोलाकार प्रोटीन प्रत्येक के एक-एक उदाहरण दीजिए।

19. (i) Name the method of refining of metals such as Zirconium.

(ii) In the extraction of Al, impure Al_2O_3 is dissolved in conc. NaOH to form sodium aluminate and leaving impurities behind. What is the name of this process ?

(iii) What is the function of limestone in the extraction of iron from its oxides ?

- (i) जिर्कोनियम के परिष्करण की विधि का नाम दीजिए।
- (ii) अशुद्ध Al_2O_3 से Al के निष्कर्षण में Al_2O_3 को NaOH के सांद्रित विलयन में सोडियम एलुमीनेट बनाने के लिए घुलाया जाता है जिससे अशुद्धियाँ पीछे छूट जाती हैं। इस प्रक्रम का क्या नाम है ?
- (iii) ऑक्साइड अयस्क से आयरन के निष्कर्षण में चूने के पत्थर का क्या काम है ?
20. (i) For the complex $[\text{CoF}_6]^{3-}$, write the hybridisation type, magnetic character and spin of the complex. (At. number : Co = 27)
- (ii) Draw one of the geometrical isomers of the complex $[\text{Co}(\text{en})_2\text{Cl}_2]^+$ which is optically active.
- (i) कॉम्प्लेक्स $[\text{CoF}_6]^{3-}$ के लिए संकरण, चुम्बकीय व्यवहार और स्पिन लिखिए। (प. संख्या : Co = 27)
- (ii) कॉम्प्लेक्स $[\text{Co}(\text{en})_2\text{Cl}_2]^{2+}$ का एक ज्यामितीय समावयवी को रेखांकित कीजिए जो प्रकाशकीय सक्रिय हो।
21. Calculate E°_{cell} for the following reaction at 298 K :
- $$2\text{Cr}(\text{s}) + 3\text{Fe}^{2+}(0.01\text{M}) \rightarrow 2\text{Cr}^{3+}(0.01\text{M}) + 3\text{Fe}(\text{s})$$
- Given : $E^\circ_{\text{cell}} = 0.261 \text{ V}$
- 298 K पर निम्न अभिक्रिया के लिए E°_{cell} का परिकलन कीजिए :
- $$2\text{Cr}(\text{s}) + 3\text{Fe}^{2+}(0.01\text{M}) \rightarrow 2\text{Cr}^{3+}(0.01\text{M}) + 3\text{Fe}(\text{s})$$
- दिया गया : $E^\circ_{\text{cell}} = 0.261 \text{ V}$
22. An element crystallizes in a fcc lattice with cell edge of 400 pm. The density of the element is 7 g cm^{-3} . How many atoms are present in 280 g of the element ?
- सेल कोर 400 pm के साथ एक तत्व f.c.c. जालक में क्रिस्टलित होता है। तत्व का घनत्व 7 g cm^{-3} है। तत्व के 280 g में कितने परमाणु विद्यमान हैं ?
23. Due to hectic and busy schedule, Mr. Awasthi made his life full of tensions and anxiety. He started taking sleeping pills to overcome the depression without consulting the doctor. Mr. Roy, a close friend of Mr. Awasthi, advised him to stop taking sleeping pills and suggested to change his lifestyle by doing Yoga, meditation and some physical exercise. Mr. Awasthi followed his friend's advice and after few days he started feeling better.
- After reading the above passage, answer the following :
- (i) What are the values (at least two) displayed by Mr. Roy ?
- (ii) Why is it not advisable to take sleeping pills without consulting doctor ?
- (iii) What are tranquilizers ? Give two examples.

अत्यंत व्यस्तता के कारण मि. अवस्थी ने अपना जीवन तनावपूर्ण बना दिया था। उन्होंने तनाव पर कंट्रोल करने के लिए नींद की गोलियाँ लेना शुरू कर दिया और इसके लिए डॉक्टर की सलाह नहीं ली। मि. अवस्थी के

एक मित्र, मि. रॉय ने उन्हें नींद की गोली न लेने की सलाह दी साथ ही योगासन द्वारा जीवन पद्धति में सुधार कर कसरत करने की सलाह दी। मि. अवस्थी ने अपने मित्र के सलाह के अनुसार जीवन बिताना प्रारम्भ कर दिया और शीघ्र ही अच्छा महसूस करने लगे।

उपरोक्त पैराग्राफ को पढ़कर निम्न के उत्तर दीजिए :

- (i) मि. रॉय द्वारा बताए गए मूल्य (कम से कम दो) क्या हैं?
 - (ii) बिना डॉक्टर की सलाह के नींद की गोली क्यों नहीं लेनी चाहिए?
 - (iii) ट्रैक्वीलाइजर क्या होते हैं? दो उदाहरण दीजिए।
24. (a) Calculate the boiling point of solution when 2 g of Na_2SO_4 ($M = 142 \text{ g mol}^{-1}$) was dissolved in 50 g of water, assuming Na_2SO_4 undergoes complete ionization. (K_b for water = $0.52 \text{ K kg mol}^{-1}$)
- (b) Define the following terms :
- (i) Colligative properties
 - (ii) Ideal solution

OR

- (a) When 2.56 g of sulphur was dissolved in 100 g of CS_2 , the freezing point lowered by 0.383 K. Calculate the formula of sulphur (S_x).
(K_f for $\text{CS}_2 = 3.83 \text{ K kg mol}^{-1}$, Atomic mass of Sulphur = 32 g mol^{-1})
- (b) Blood cells are isotonic with 0.9% sodium chloride solution. What happens if we place blood cells in a solution containing :
- (i) 1.2% sodium chloride solution ?
 - (ii) 0.4% sodium chloride solution ?
- (a) उस विलयन का क्वथनांक परिकलित कीजिए जिसके 50 g जल में Na_2SO_4 ($M = 142 \text{ g mol}^{-1}$) का 2 g घुला है। यह मानकर चलिए कि Na_2SO_4 पूर्णतः आयनीकृत है। (जल के लिए $K_b = 0.52 \text{ K kg mol}^{-1}$)
- (b) निम्न पदों को परिभाषित कीजिए :
- (i) कोलिगेटिव गुणधर्म
 - (ii) आइडियल विलयन

अथवा

- (a) जब CS_2 के 100 g में 2.56 g सल्फर घुलाया गया तो हिमांक 0.383 K नीचे चला गया। सल्फर (S_x) के सूत्र को परिकलित कीजिए।
(K_f CS_2 के लिए = $3.83 \text{ K kg mol}^{-1}$, सल्फर का प. द्रव्यमान = 32 g mol^{-1})
- (b) 0.9% सोडियम क्लोराइड विलयन के साथ रक्त सेल आइसोटोनिक हैं। क्या होता है जब रक्त सेलों में होता है :
- (i) 1.2% सोडियम क्लोराइड विलयन
 - (ii) 0.4% सोडियम क्लोराइड विलयन

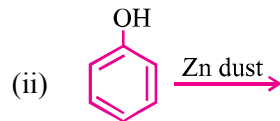
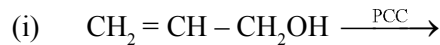
25. (a) Account for the following :
- H_2Te is more acidic than H_2S .
 - PCl_5 is more covalent than PCl_3 .
 - Boiling points of interhalogens are little higher as compared to pure halogens.
- (b) Draw the structure of :
- $HClO_4$
 - $XeOF_4$

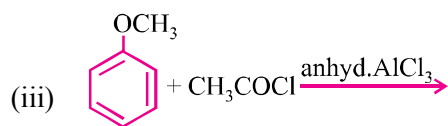
OR

- Arrange the following in the increasing order of their reducing character :
 $H_3PO_3, H_3PO_4, H_3PO_2$
 - Out of He and Xe, which one can easily form compound and why ?
 - Write the conditions to maximize the yield of ammonia in Haber's process.
 - Write two uses of chlorine gas.
 - How can you detect the presence of SO_2 gas ?
- (a) निम्न के कारण बताइए :
- H_2S की अपेक्षा H_2Te अधिक अम्लीय है।
 - PCl_3 की अपेक्षा PCl_5 अधिक सहसंयोजक है।
 - शुद्ध हैलोजनों की अपेक्षा अंतर्हैलोजन अधिक सहसंयोजक होते हैं।
- (b) (i) $HClO_4$ (ii) $XeOF_4$ की संरचनाएँ आरेखित कीजिए।

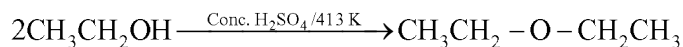
अथवा

- निम्न को उनके अपचाय की स्वभाव के बढ़ते क्रम में लिखिए :
 $H_3PO_3, H_3PO_4, H_3PO_2$
 - He और Xe में कौन अधिक सरलता से यौगिक बनाता है और क्यों ?
 - हैबर प्रक्रम में सर्वाधिक अमोनिया उत्पन्न करने के लिए क्या स्थिति होनी चाहिए ?
 - क्लोरीन गैस के दो उपयोग लिखिए।
 - SO_2 गैस की पहचान आप कैसे करेंगे ?
26. (a) Write the product(s) in each of the following reactions :





(b) Write the mechanism of the following reaction :



OR

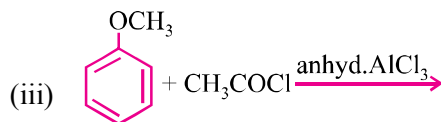
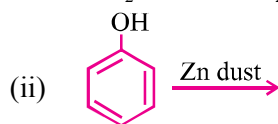
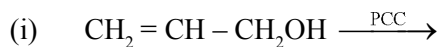
(a) Write equations of the following reactions :

- (i) Bromine in CS₂ with phenol
- (ii) Treating phenol with chloroform in the presence of aq. NaOH
- (iii) Anisole reacts with HI

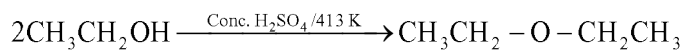
(b) Distinguish between :

- (i) Ethanol and Diethyl ether
- (ii) Propanol and t-butyl alcohol

(a) निम्न में प्रत्येक के उत्पाद लिखिए :



(b) निम्न प्रक्रिया की क्रियाविधि लिखिए :



अथवा

(a) निम्न अभिक्रियाओं के समीकरणों को लिखिए :

- (i) फीनॉल के साथ CS₂ में ब्रोमीन
- (ii) जलीय NaOH की उपस्थिति में क्लोरोफॉर्म के साथ फीनॉल का उपचार
- (iii) HI के साथ एनिसोल की अभिक्रिया

(b) निम्न में पहचान कीजिए :

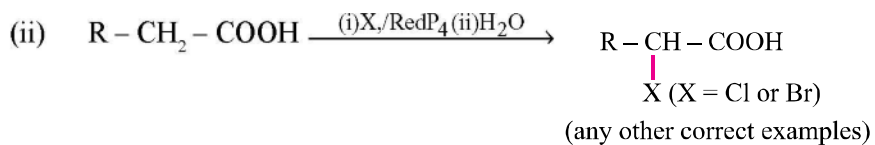
- (i) एथैनॉल और डाइएथिल ईथर
- (ii) प्रोपैनॉल और t-ब्युटिल ऐल्कोहॉल

MARKING SCHEME-2

1. 2, 4-Dibromoaniline/2, 4-Dibromobenzenamine 1
2. Anti-ferromagnetism 1
3. NO₂ 1
4. Like charged particles cause repulsion/Brownian motion/Solvation 1
5. CH₂ = CH – CH₂Cl 1
6. (i) A : K₂MnO₄/MnO₄²⁻, B : KMnO₄/MnO₄⁻ ½ + ½
 (ii) On heating it decomposes forming K₂MnO₄ and oxygen gas

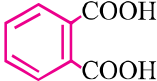
OR

- 2KMnO₄ → K₂MnO₄ + MnO₂ + O₂ 1
7. (i) [Pd(NH₃)₄]Cl₂ 1
 (ii) Tetraamminepalladium(II) chloride 1
8. (i) Mercury cell 4 × ½ = 2
 (ii) Fuel cell
 (iii) Lead storage battery
 (iv) Dry cell
9. (i) CH₃CHO $\xrightarrow{\text{Zn-Hg/HCl}}$ CH₃CH₃ + H₂O 1



OR

- (i)
$$\text{C}_6\text{H}_5 - \text{CH}_3 + \text{CrO}_2\text{Cl}_2 \xrightarrow{\text{CS}_2} \begin{array}{c} \text{C}_6\text{H}_5 - \text{CH}(\text{OCrOHCl}_2)_2 \\ | \\ \text{C}_6\text{H}_5 - \text{CHO} \end{array} \xrightarrow{\text{H}_3\text{O}^+} \text{C}_6\text{H}_5 - \text{CHO}$$
 1
- (ii) CH₃ – COCl $\xrightarrow{\text{H}_2 / \text{Pd, BaSO}_4}$ CH₃ – CHO + HCl 1
 (Any other correct method)

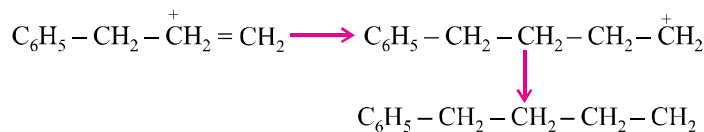
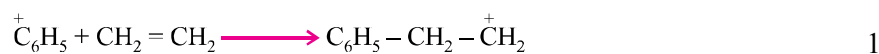
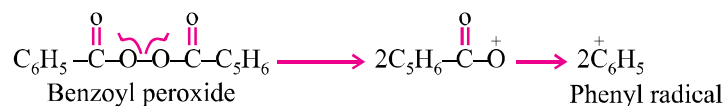
10. (i) Order is zero and molecularity is two/one. $\frac{1}{2} + \frac{1}{2}$
 (ii) $\text{mol L}^{-1} \text{s}^{-1}$ 1
11. (i) It acts as initiator of free radical/catalyst. 1
 (ii) $\text{CH}_2\text{OH} - \text{CH}_2\text{OH}$ and 

Or Ethylene glycol and phthalic acid/IUPAC name 1

(iii) Buna-N < PVC < Nylon-6 1

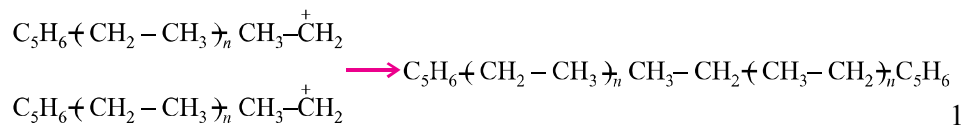
OR

Chain initiation steps 1



Chain terminating step

For termination of the long chain, these free radicals can combine in different ways to form polythene. One mode of termination of chain is shown as under.



12. $\log k = \log A - \frac{E_a}{2.303RT}$; $\log k = 14.2 - \frac{1.0 \times 10^4 \text{ K}}{T}$

$$\frac{E_a}{2.303RT} = \frac{1.0 \times 10^4 \text{ K}}{T} \quad \frac{1}{2}$$

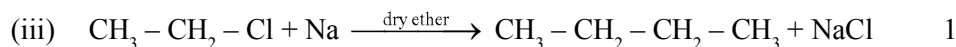
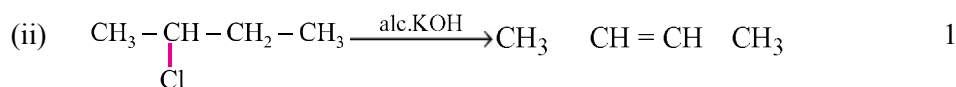
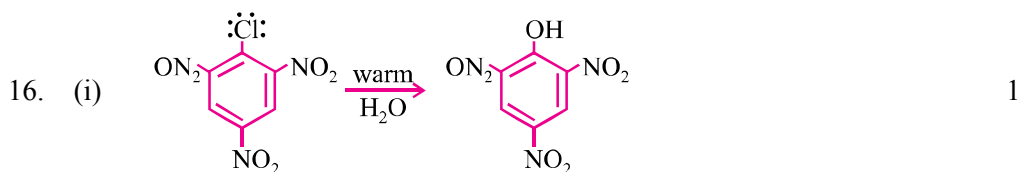
$$E_a = 2.303 \times 8.314 \text{ J mol}^{-1} \text{ K}^{-1} \times 1.0 \times 10^4 \text{ K} \quad 1$$

$$E_a = 19.15 \times 10^4 \text{ J mol}^{-1} = 191.5 \text{ kJ/mol}^{-1}$$

$$\text{Rate constant, } k = \frac{0.693}{t_{1/2}} = \frac{0.693}{200} \text{ min}^{-1} \quad \frac{1}{2}$$

$$= 0.0034 \text{ min}^{-1} = 3.4 \times 10^{-3} \text{ min}^{-1} \quad 1$$

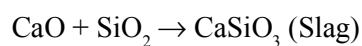
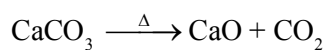
13. (i) In ketones presence of two electron releasing alkyl groups reduce the electrophilicity of the carbonyl group more effectively than in aldehydes wherein only one alkyl group occurs/Presence of two alkyl groups in ketones provide more steric hinderance to incoming nucleophile than in aldehydes where only one alky group occurs. 1
- (ii) Due to absence of alpha hydrogen. 1
- (iii) Because the carboxyl group is deactivating and the Lewis acid AlCl_3 gets bonded to the carboxyl group. 1
14. (i) Silica gel 1
- (ii) H_3PO_4 is more effective in causing coagulation because of greater negative charge/Hardy Schulze Rule. $\frac{1}{2} + \frac{1}{2}$
- (iii) Proteins 1
15. (i) Due to multiple bonding ability of oxygen with transition metals/ $p\pi$ - $d\pi$ bonding. 1
- (ii) Due to absence of unpaired electrons in zinc atom and the presence of unpaired electrons in chromium atom. 1
- (iii) Eu^{2+} gets oxidized to more stable + 3 state. 1




17. (i) A : $\text{C}_6\text{H}_5\text{CONH}_2$; B : $\text{C}_6\text{H}_5\text{NH}_2$; C : $\text{C}_6\text{H}_5\text{NHCOCH}_3$ $\frac{1}{2} + \frac{1}{2} + \frac{1}{2}$
- (ii) A : $\text{C}_6\text{H}_5\text{NO}_2$; B : $\text{C}_6\text{H}_5\text{NH}_2$; C : $\text{C}_6\text{H}_5\text{NC}$ $(\frac{1}{2} + \frac{1}{2} + \frac{1}{2})$

18. (i) α -D-glucose and α -D-glucose/Glucose and glucose 1
 (ii) Vitamin B₆/Pyridoxine 1
 (iii) Fibrous protein : Keratin/Myosin/Kephalin ½
 Globular protein : Insulin/Albumin/Haemoglobin ½
 (Or any other one)
19. (i) Van Arkel method 1
 (ii) Leaching/Bayer's process 1
 (iii) Limestone decomposes to CaO (fLkux) which removes silica impurity as slag. 1

OR



20. (a) sp^3d^2 hybridisation; Paramagnetic; High spin complex 1 + ½ + ½



21.
$$E_{cell} = E_{cell}^0 - \frac{0.591}{6} \log \frac{[\text{Cr}^{3+}]^2}{[\text{Fe}^{2+}]^3}$$
 1

$$0.261 \text{ V} = E_{cell}^0 - \frac{0.591}{6} \log \frac{(0.01)^2}{(0.01)^3}$$
 1


$$0.261 \text{ V} = E_{cell}^0 - \frac{0.591}{6} \log(10^2)$$

$$0.261 \text{ V} = E_{cell}^0 - \frac{0.591}{6} \times 2$$


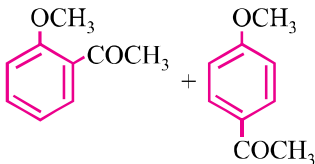
$$E_{cell}^0 = E_{cell} + 0.0197 \text{ V} = 0.2807 \text{ V}$$
 1

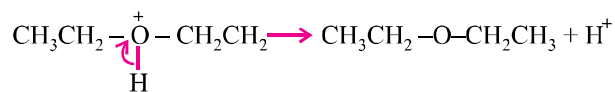
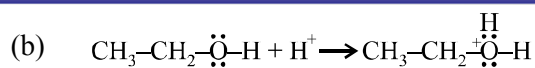
22. $d = \frac{M \times z}{a^3 \times N_A}$ 1
- $N_A = \frac{M \times z}{a^3 \times d} = \frac{280 \text{ g} \times 4}{(400 \times 10^{-10} \text{ cm})^3 \times 7 \text{ g cm}^{-3}}$ 1
- $= 2.5 \times 10^{24}$ atoms (Or any other correct method) 1
23. (i) Aware, concerned or any other correct two values $\frac{1}{2} + \frac{1}{2}$
- (ii) Side effects, unknown health problems 1
- (iii) Neurologically active drugs/stress relievers 1
- Example : valium, equanil (or any other two examples) $\frac{1}{2} + \frac{1}{2}$
24. (a) $T_b = i \times K_b \times m$
- $\Delta T_b = i \times \frac{K_b \times W_b}{M_b \times W_a} \times 1000$ 1
- $T_b - T_b^0 = \frac{3 \times 0.52 \text{ k kg/mol} \times 2 \times 1000 \text{ g kg}^{-1}}{142 \text{ g/mol} \times 50 \text{ g}}$ 1
- $T_b - 373 \text{ K} = 0.44\text{K}; T_b = 373.44 \text{ K}/100.44^\circ \text{C}$ 1
- (b) (i) Properties of dilute solutions that depend on the number of particles of solute but not on nature of the solute particles are called colligative properties. 1
- (ii) The solutions which obey Raoult's law over the entire range of concentration are known as ideal solutions. 1
- OR**
- (a) $\Delta T_f = K_f m$ Or $M_b = \frac{K_f \times W_b}{\Delta T_f \times W_a} \times 1000$ $\frac{1}{2}$
- $M_B = \frac{3.83 \times 2.56}{0.383 \times 100} \times 1000$ 1
- $= 256 \text{ g mol}^{-1}$ $\frac{1}{2}$
- Atomicity = $256/32 = 8$
- Formula of sulphur = S_8 1

- (b) (i) Shrinks 1
(ii) Swells 1
25. (a) (i) Due to decrease in bond enthalpy from H_2S to H_2Te /Larger H – Te bond than H – S bond allowing more dissociation of H_2Te . 1
(ii) + 5 oxidation state of P in PCl_5 makes it more covalent/high charge to size ratio. 1
(iii) Interhalogen compounds are slightly polar having dipole-dipole forces but pure halogens non-polar, have weak van der Waals forces. 1

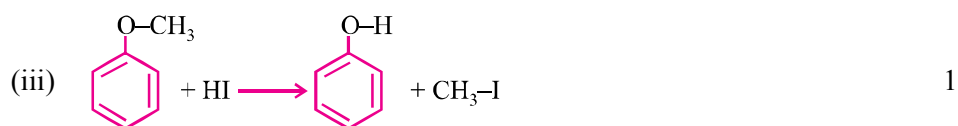
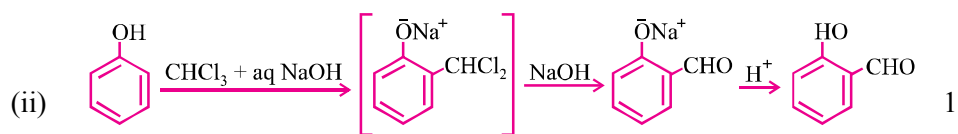
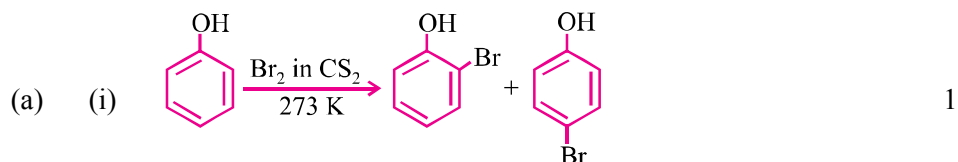


OR

- (i) $H_3PO_4 < H_3PO_3 < H_3PO_2$ 1
(ii) Xe; lower ionization enthalpy of Xe than He. $\frac{1}{2} + \frac{1}{2}$
(iii) High pressure, optimum temperature, use of catalyst. 1
(iv) For bleaching woodpulp/cotton/textiles/extraction of gold/platinum/manufacture of dyes/drugs/ $CHCl_3/CCl_4/DDT$ / Sterilising water, etc. (Or any other two uses) $\frac{1}{2} + \frac{1}{2}$
(v) SO_2 decolourises acidified dilute solution of $KMnO_4$ /changes orange colour of acidified $K_2Cr_2O_7$ to green. 1
26. (a) (i) $CH_2 = CH - CHO$ 1
(ii) C_6H_6 /  1
(iii)  1



OR



(b) (i) On treatment with acetic acid or acetic anhydride in presence of drops of H_2SO_4 , ethanol gives pleasant smell but diethyl ether does not. 1

(ii) On treatment with anhydrous ZnCl_2 and HCl , ter-butyl alcohol gives immediate turbidity but propanol does not. (Or any other correct test) 1

UNSOLVED SAMPLE PAPER-1

CHEMISTRY (Theory)

Time allowed : 3 hours

Maximum Marks : 70

निर्धारित समय : 3 घण्टे

अधिकतम अंक : 70

General Instructions :

- All questions are compulsory.
- Question numbers 1 to 5 are very short answer questions and carry 1 mark each.
- Question numbers 6 to 10 are short answer questions and carry 2 marks each.
- Question numbers 11 to 22 are also short answer questions and carry 3 marks each.
- Question number 23 is a value based question and carry 4 marks.
- Questions number 24 to 26 are long answer questions and carry 5 marks each.
- Use log tables, if necessary. Use of calculators is not allowed.

सामान्य निर्देश :

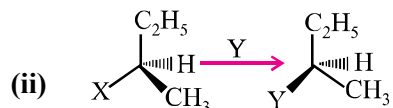
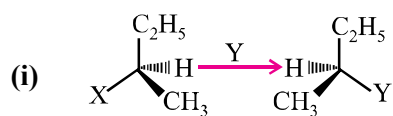
- सभी प्रश्न अनिवार्य हैं।
- प्रश्न संख्या 1 से 5 तक अतिलघु उत्तरीय प्रश्न हैं और प्रत्येक प्रश्न के लिए 1 अंक है।
- प्रश्न संख्या 6 से 10 तक लघु उत्तरीय प्रश्न हैं और प्रत्येक प्रश्न के लिए 2 अंक हैं।
- प्रश्न संख्या 11 से 22 तक भी लघु उत्तरीय प्रश्न हैं और प्रत्येक प्रश्न के लिए 3 अंक हैं।
- प्रश्न संख्या 23 मूल्याधारित प्रश्न है और इसके लिए 4 अंक हैं।
- प्रश्न संख्या 24 से 26 तक दीर्घ उत्तरीय प्रश्न हैं और प्रत्येक प्रश्न के लिए 5 अंक हैं।
- यदि आवश्यकता हो तो लॉग टेबलों का प्रयोग करें। कैलकुलेटरों के उपयोग की अनुमति नहीं है।

- On heating $\text{Pb}(\text{NO}_3)_2$ a brown gas is evolved which undergoes dimerization on cooling. Identify the gas.

$\text{Pb}(\text{NO}_3)_2$ को गर्म करने पर एक भूरे रंग की गैस निकलती है जिसका ठंडे होने पर द्विलकीकरण हो जाता है। गैस की पहचान कीजिए।

- Which of the following two reactions is $\text{S}_\text{N}2$ and why ?

निम्नलिखित दो अभिक्रियाओं में से कौन $\text{S}_\text{N}2$ है और क्यों ?



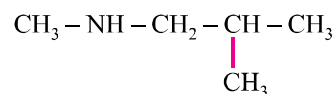
3. Write the reason for the stability of colloidal sols.

कोलाइडी सॉल की स्थिरता के लिए कारण लिखिए।

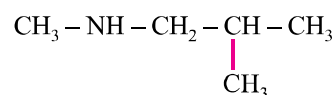
4. ZnO turns yellow on heating. Why ?

गर्म करने पर ZnO पीले रंग की हो जाती है। क्यों ?

5. Write the IUPAC name of the given compound :



निम्न यौगिक का आई. यू. पी. ए. सी. नाम लिखिए :



6. Write the structures of the following :



निम्न की संरचनाएँ लिखिए :



7. (i) Write the colligative property which is used to find the molecular mass of macromolecules.

(ii) In non-ideal solution, what type of deviation shows the formation of minimum boiling azeotropes ?

(i) उस अणुसंख्य गुणधर्म को लिखिए जो गुरु अणुओं के आणविक द्रव्यमान को ज्ञात करने में प्रयोग में आता है।

(ii) अनादर्श विलयन में विचलन का कौन-सा प्रकार न्यूनतम क्वथन एजियोट्रॉप के निर्माण को दर्शाता है ?

8. Write the chemical equations involved in the following reactions :

(i) Kolbe's reaction

(ii) Friedel-Crafts acetylation of anisole

OR

How do you convert :

- (i) Phenol to toluene
- (ii) Formaldehyde to ethanol

निम्न अभिक्रियाओं से सम्बन्धित रासायनिक समीकरणों को लिखिए :

- (i) कोल्बे अभिक्रिया
- (ii) ऐनिसोल की फ्राइडेल-क्रैफ्ट ऐसीटिलीकरण अभिक्रिया

अथवा

आप कैसे रूपांतरण करते हैं :

- (i) फीनॉल का टाउलीन में
- (ii) फॉर्मैल्डिहाइड का एथेनॉल में

9. When a coordination compound $\text{NiCl}_2 \cdot 6\text{H}_2\text{O}$ is mixed with AgNO_3 , 2 moles of AgCl are precipitated per mole of the compound. Write :

- (i) Structural formula of the complex
- (ii) IUPAC name of the complex

जब एक उपसहसंयोजक यौगिक $\text{NiCl}_2 \cdot 6\text{H}_2\text{O}$ को AgNO_3 के साथ मिलाया जाता है तब यौगिक के प्रति मोल पर AgCl के दो मोल अवक्षेपित होते हैं। लिखिए :

- (i) कॉम्प्लेक्स का संरचना सूत्र
- (ii) कॉम्प्लेक्स का आई. यू. पी. ए. सी. नाम

10. For a reaction : $2\text{NH}_3 (\text{g}) \xrightarrow{\text{Pt}} \text{N}_2 (\text{g}) + 3\text{H}_2 (\text{g})$

$$\text{Rate} = k$$

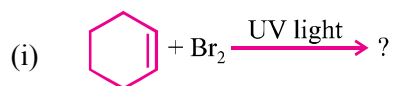
- (i) Write the order and molecularity of this reaction.
- (ii) Write the unit of k.

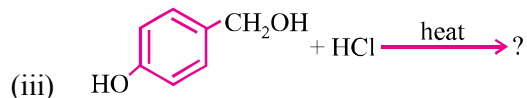
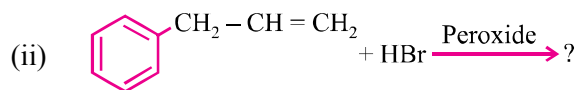
एक अभिक्रिया : $2\text{NH}_3 (\text{g}) \xrightarrow{\text{Pt}} \text{N}_2 (\text{g}) + 3\text{H}_2 (\text{g})$

$$\text{दर} = k$$

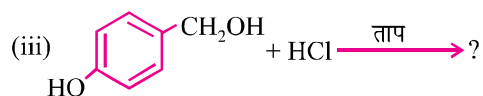
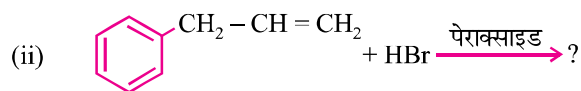
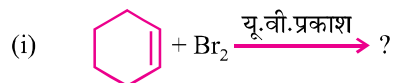
- (i) इस अभिक्रिया की कोटि और आणविकता लिखिए।
- (ii) k का यूनिट लिखिए।

11. Write the major monohalo product(s) in each of the following reactions :





निम्न अभिक्रियाओं में प्रत्येक के मुख्य मोनोहैलो उत्पाद को लिखिए :



12. An element crystallizes in a fcc lattice with cell edge of 400 pm. The density of the element is 7 g cm^{-3} . How many atoms are present in 280 g of the element ?

एक तत्व 400 pm कोशिका के किनारे f.c.c. में क्रिस्टलित होता है। तत्व का घनत्व 7 g cm^{-3} है। तत्व के 280 g में कितने परमाणु विद्यमान हैं ?

13. Give reasons for the following :

- Protonation of phenols is difficult whereas ethanol easily undergoes protonation.
- Boiling point of ethanol is higher than that of dimethyl ether.
- Anisole on reaction with HI gives phenol and $\text{CH}_3 - \text{I}$ as main products and not iodobenzene and CH_3OH .

निम्न के लिए कारण दीजिए :

- फीनॉल का प्रोटोनीकरण कठिन है जबकि एथेनॉल का प्रोटोनीकरण आसानी से किया जाता है।
 - डाईमैथिल ईथर की अपेक्षा एथेनॉल का क्वथनांक उच्चतर होता है।
 - HI के साथ अभिक्रिया करने पर ऐनिसोल फीनॉल और $\text{CH}_3 - \text{I}$ मुख्य उत्पाद देता है न कि आयडोबेन्जीलन और CH_3OH .
14. (i) Write one reaction of D-Glucose which cannot be explained by its open chain structure.
- What type of linkage is present in Nucleic acids ?
 - Give one example each for water soluble vitamins and fat soluble vitamins.

- (i) D- ग्लूकोस की एक अभिक्रिया लिखिए जिसकी व्याख्या इसकी खुली शृंखला संरचना के द्वारा नहीं की जा सकती है।
- (ii) न्यूक्लिक अम्ल में किस प्रकार की लिंकेज होती है?
- (iii) जल-घुलनशील और फैट-घुलनशील विटामिन प्रत्येक के एक-एक उदाहरण दीजिए।
15. Calculate the boiling point of solution when 2 g of Na_2SO_4 ($M = 142 \text{ g mol}^{-1}$) was dissolved in 50 g of water, assuming Na_2SO_4 undergoes complete ionization. (K_b for water = $0.52 \text{ K kg mol}^{-1}$)
- जब 50 g जल में Na_2SO_4 ($M = 142 \text{ g mol}^{-1}$) का 2 g घुलाया जाता है तब प्राप्त विलयन के क्वथनांक का परिकलन कीजिए। यह मान कर चलिए कि Na_2SO_4 का पूरी तरह आयनीकरण हो जाता है। (जल के लिए $K_b = 0.52 \text{ K kg mol}^{-1}$)
16. (i) Name the method of refining which is based on the principle of adsorption.
- (ii) What is the role of depressant in froth floatation process ?
- (iii) What is the role of limestone in the extraction of iron from its oxides ?
- (i) एक परिष्करण विधि का नाम लिखिए जो अधिशोषण के सिद्धान्त पर आधारित होता है।
- (ii) झाग प्लवन विधि में अवनमक की क्या भूमिका होती है?
- (iii) ऑक्साइड अयस्क से आयरन के निष्कर्षण में चूने के पत्थर की क्या भूमिका होती है?
17. Define the following terms :
- (i) O/W emulsion
- (ii) Zeta potential
- (iii) Multimolecular colloids
- निम्न पदों को परिभाषित कीजिए :
- (i) O/W इमल्शन
- (ii) जीटा पोटेंशियल
- (iii) बहुलीआणविक कोलॉइड
18. (a) For the complex $[\text{Fe}(\text{CN})_6]^{4-}$, write the hybridisation, magnetic character and spin type of the complex. (At. number : Fe = 26)
- (ii) Draw one of the geometrical isomers of the complex $[\text{Co}(\text{en})_2\text{Cl}_2]^+$ which is optically active.
- (i) कॉम्प्लेक्स $[\text{Fe}(\text{CN})_6]^{4-}$ के लिए संकरण, चुम्बकीय व्यवहार और स्पिन प्रकार को लिखिए। (प. संख्या : Fe = 26)
- (ii) कॉम्प्लेक्स $[\text{Co}(\text{en})_2\text{Cl}_2]^{2+}$ के एक ज्यामितीय एकलक को रेखांकित कीजिए जो प्रकाशकीय सक्रिय होता है।

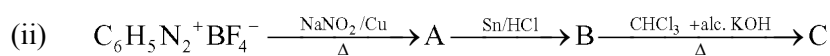
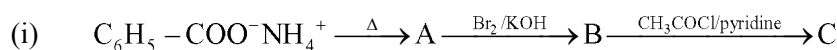
19. Assign reason for the following :

- (i) H_3PO_2 is a stronger reducing agent than H_3PO_4 .
- (ii) Sulphur shows more tendency for catenation than oxygen.
- (iii) Reducing character increases from HF to HI.

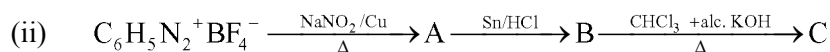
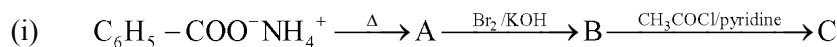
निम्न के कारण निर्धारित कीजिए :

- (i) H_3PO_4 की अपेक्षा H_3PO_2 प्रबलतर अपचायक है।
- (ii) ऑक्सीजन की अपेक्षा सल्फर में शृंखलन की प्रवृत्ति अधिक है।
- (iii) अपचायकी व्यवहार HF से HI की ओर बढ़ता है।

20. Write the structures of A, B and C in the following reactions :



निम्न अभिक्रियाओं को पूर्ण कीजिए :



21. The rate constant for the first order decomposition of H_2O_2 is given by the following equation :

$$\log k = 14.2 - \frac{1.0 \times 10^4 k}{T}$$

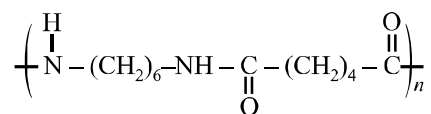
Calculate E_a for this reaction and rate constant k if its half-life period be 200 minutes. (Given : $R = 8.314 \text{ JK}^{-1} \text{ mol}^{-1}$)

H_2O_2 के प्रथम कोटि विघटन के दर स्थिरांक के लिए निम्न समीकरण दिया जाता है :

$$\log k = 14.2 - \frac{1.0 \times 10^4 k}{T}$$

इस अभिक्रिया के लिए E_a और दर स्थिरांक k को परिकलित कीजिए अगर इसकी अर्ध-आयु 200 मिनट हो। (दिया गया है : $R = 8.314 \text{ JK}^{-1} \text{ mol}^{-1}$)

22. (i) What is the role of benzoyl peroxide in the polymerization of ethene ?
- (ii) Identify the monomers in the following polymer :



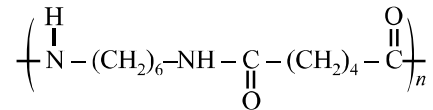
- (iii) Arrange the following polymers in the increasing order of their intermolecular forces :

Nylon-6, 6, Polythene, Buna-S

OR

Write the mechanism of free radical polymerization of ethene.

- (i) एथीन बहुलकीकरण में बेन्जोयल परऑक्साइड की क्या भूमिका होती है ?
 (ii) निम्न बहुलक में एकलक की पहचान कीजिए :



- (iii) निम्न बहुलकों को उनके अंतर्आणविक बल के आधार पर बढ़ते क्रम में व्यवस्थित कीजिए :
 नायलान-6, 6, पॉलीथीन, बूना-S

अथवा

एथीन के फ्री रेडिकल बहुलकीकरण की क्रियाविधि को लिखिए।

23. Due to hectic and busy schedule, Mr. Awasthi made his life full of tensions and anxiety. He started taking sleeping pills to overcome the depression without consulting the doctor. Mr. Roy, a close friend of Mr. Awasthi, advised him to stop taking sleeping pills and suggested to change his lifestyle by doing Yoga, meditation and some physical exercise. Mr. Awasthi followed his friend's advice and after few days he started feeling better.

After reading the above passage, answer the following :

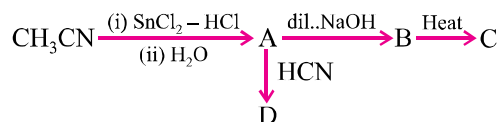
- (i) What are the values (at least two) displayed by Mr. Roy ?
 (ii) Why is it not advisable to take sleeping pills without consulting doctor ?
 (iii) What are tranquilizers ? Give two examples.

अत्यंत व्यस्तता के कारण श्रीमान् अवस्थी ने अपना जीवन तनावपूर्ण बना रखा था। अवनमन को दूर करने के लिए उन्होंने बिना डॉक्टर की सलाह के नींद की गोलियाँ लेना शुरू कर दिया। श्रीमान् अवस्थी के एक नजदीकी मित्र श्रीमान् रॉय ने उन्हें नींद की गोली न लेने की सलाह दी साथ ही योगासन करने को कहा। अवस्थी जी ने अपने मित्र की सलाह मानकर योगासन और कुछ व्यायाम करना शुरू कर दिया। थोड़े ही दिन में अवस्थी अपने को स्वस्थ महसूस करने लगे।

उपरोक्त पैसेज को पढ़कर निम्न के उत्तर लिखिए :

- (i) श्रीमान् रॉय ने किन मूल्यों (कम से कम दो) को प्रदर्शित किया ?
 (ii) बिना डॉक्टर की सलाह के नींद की गोली क्यों नहीं लेनी चाहिए ?
 (iii) नींदकारी गोलियाँ क्या होती हैं ? दो उदाहरण दीजिए।

24. (a) Write the structures of A, B, C and D in the following reactions :



- (b) Distinguish between :

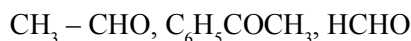
- (i) $\text{C}_6\text{H}_5 - \text{CH} = \text{CH} - \text{COCH}_3$ and $\text{C}_6\text{H}_5 - \text{CH} = \text{CH} - \text{COCH}_2\text{CH}_3$
 (ii) $\text{CH}_3\text{CH}_2\text{COOH}$ and HCOOH

- (c) Arrange the following in the increasing order of their boiling points :

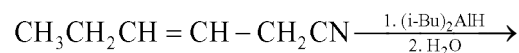


OR

- (a) Write the chemical reaction involved in Etard reaction.
 (b) Arrange the following in the increasing order of their reactivity towards nucleophilic addition reaction :

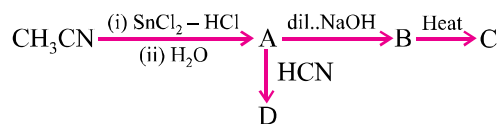


- (c) Why pKa of $\text{Cl} - \text{CH}_2 - \text{COOH}$ is lower than the pKa of CH_3COOH ?
 (d) Write the product in the following reaction :



- (e) A and B are two functional isomers of compound $\text{C}_3\text{H}_6\text{O}$. On heating with NaOH and I_2 , isomer A forms yellow precipitate of iodoform whereas isomer B does not form any precipitate. Write the formulae of A and B.

- (a) निम्न अभिक्रियाओं में A, B, C और D की संरचनाओं को लिखिए :



- (b) निम्न के बीच पहचान कीजिए :

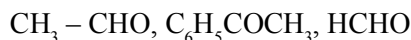
- (i) $\text{C}_6\text{H}_5 - \text{CH} = \text{CH} - \text{COCH}_3$ और $\text{C}_6\text{H}_5 - \text{CH} = \text{CH} - \text{COCH}_2\text{CH}_3$ में
 (ii) $\text{CH}_3\text{CH}_2\text{COOH}$ और HCOOH में

- (c) निम्न को उनके बढ़ते क्वथनांक के क्रम में लिखिए :

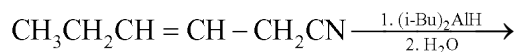


अथवा

- (a) ईटाई अभिक्रिया से सम्बन्धित रासायनिक अभिक्रिया को लिखिए।
 (b) न्यूक्लियोफिलिक योगात्मक अभिक्रिया के प्रति उनकी बढ़ती सक्रियता के क्रम में निम्न को व्यवस्थित कीजिए :

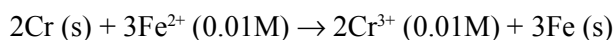


- (c) $\text{Cl} - \text{CH}_2 - \text{COOH}$ का pK_a CH_3COOH के pK_a से कम क्यों है?
 (d) निम्न अभिक्रिया में उत्पाद को लिखिए :



- (e) यौगिक $\text{C}_3\text{H}_6\text{O}$ के दो क्रियात्मक समावयवी A और B हैं। NaOH और I_2 के साथ गर्म करने पर समावयवी A आयडोफार्म का पीला अवक्षेप देता है जबकि समावयवी B कोई अवक्षेप नहीं देता है। A और B के अणुसूत्र लिखिए।

25. (a) Calculate E°_{cell} for the following reaction at 298 K :



$$\text{Given : } E^\circ_{\text{cell}} = 0.261 \text{ V}$$

- (b) Using the E° values of A and B, predict which one is better for coating the surface of iron [$E^\circ(\text{Fe}^{2+}/\text{Fe}) = -0.44 \text{ V}$] to prevent corrosion and why ?

$$\text{Given : } E^\circ(\text{A}^{2+}/\text{A}) = -2.37 \text{ V}; E^\circ(\text{B}^{2+}/\text{B}) = -0.14 \text{ V}$$

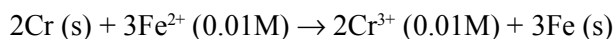
OR

- (a) The conductivity of 0.001 mol L^{-1} solution of CH_3COOH is $3.905 \times 10^{-1} \text{ S cm}^{-1}$. Calculate its molar conductivity and degree of dissociation (α).

$$\text{Given : } \lambda^\circ(\text{H}^+) = 349.6 \text{ S cm}^2 \text{ mol}^{-1} \text{ and } \lambda^\circ(\text{CH}_3\text{COO}^-) = 40.9 \text{ S cm}^2 \text{ mol}^{-1}.$$

- (b) Define electrochemical cell. What happens if external potential applied becomes greater than E°_{cell} of electrochemical cell ?

- (a) निम्न अभिक्रिया के लिए 298 K पर E°_{cell} का परिकलन कीजिए :



$$\text{दिया गया है : } E^\circ_{\text{cell}} = 0.261 \text{ V}$$

- (b) A और B के E° मानों का उपयोग करते हुए प्रागुक्ति कीजिए कि इनमें कौन आयरन के सतह लेपन के लिए बेहतर होगा जिससे उस पर जंग न लगे और क्यों ?

$$[E^\circ(\text{Fe}^{2+}/\text{Fe}) = -0.44 \text{ V}]$$

$$\text{और दिया गया } E^\circ(\text{A}^{2+}/\text{A}) = -2.37 \text{ V}; E^\circ(\text{B}^{2+}/\text{B}) = -0.14 \text{ V}$$

अथवा

- (a) CH_3COOH के एक 0.001 mol L^{-1} विलयन की चालकता $3.905 \times 10^{-1} \text{ S cm}^{-1}$ है। इसकी मोलर चालकता और वियोजन (α) की डिग्री का परिकलन कीजिए।

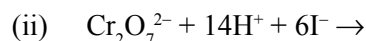
दिया गया : $\lambda^\circ(\text{H}^+) = 349.6 \text{ S cm}^2 \text{ mol}^{-1}$ और $\lambda^\circ(\text{CH}_3\text{COO}^-) = 40.9 \text{ S cm}^2 \text{ mol}^{-1}$ ।

- (b) विद्युत रासायनिक सेल को परिभाषित कीजिए। क्या होता है जब विद्युत रासायनिक सेल के E°_{cell} से लगाया गया बाह्य विभव ज्यादा हो जाता है ?

26. (a) Account for the following :

- (i) Mn shows the highest oxidation state of + 7 with oxygen but with fluorine it shows the highest oxidation state of + 4.
 (ii) Zirconium and Hafnium exhibit similar properties.
 (iii) Transition metals act as catalysts.

- (b) Complete the following equations :



OR

The elements of 3d transition series are given as :

Sc Ti V Cr Mn Fe Co Ni Cu Zn

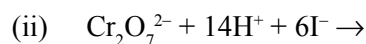
Answer the following :

- (i) Write the element which is not regarded as a transition element. Give reason.
 (ii) Which element has the highest m.p. ?
 (iii) Write the element which can show an oxidation state of + 1.
 (iv) Which element is a strong oxidizing agent in + 3 oxidation state and why ?

- (a) निम्न को कारण सहित स्पष्ट कीजिए :

- (i) ऑक्सीजन के साथ Mn उच्चतम उपचयन अवस्था + 7 दर्शाता है लेकिन फ्लुओरिन के साथ इसकी उच्चतम उपचयन अवस्था + 4 ही रहती है।
 (ii) जिर्कोनियम और हाफनियम के गुणधर्म में समानता होती है।
 (iii) संक्रमण धातुएँ उत्प्रेरक का काम करती हैं।

- (b) निम्न समीकरणों को पूरा कीजिए :



अथवा

3d संक्रमण श्रेणी के तत्व नीचे दिए जाते हैं :

Sc Ti V Cr Mn Fe Co Ni Cu Zn

निम्न के उत्तर दीजिए :

- (i) उस तत्व का नाम लिखिए जो संक्रमण तत्व नहीं माना जाता है। कारण दीजिए।
- (ii) किस तत्व का उच्चतम गलनांक है?
- (iii) उस तत्व का नाम लिखिए जो + 1 उपचयन अवस्था दर्शाता है।
- (iv) कौन तत्व + 3 उपचयन अवस्था में प्रबल उपचायक है और क्यों?

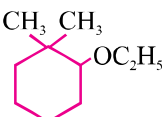
UNSOLVED SAMPLE PAPER-2

CHEMISTRY (Theory)

Time allowed : 3 hours

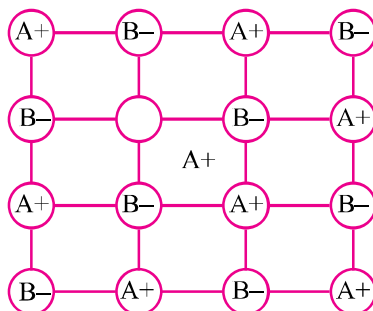
Maximum Marks : 70

General Instructions :

- (i) All questions are compulsory.
 - (ii) Question numbers 1 to 5 are very short answer questions and carry 1 mark each.
 - (iii) Question numbers 6 to 10 are short answer questions and carry 2 marks each.
 - (iv) Question numbers 11 to 22 are also short answer questions and carry 3 marks each.
 - (v) Question number 23 is a value based question and carry 4 marks.
 - (vi) Questions number 24 to 26 are long answer questions and carry 5 marks each.
 - (vii) Use log tables, if necessary. Use of calculators is not allowed.
1. Of NH_3 and N_2 , which gas will be adsorbed more readily on the surface of charcoal and why ?
 2. The deficiency of which vitamin causes the disease pernicious anemia ?
 3. Write the IUPAC name :
 - (i) 
A cyclohexane ring with an ethyl group (OC_2H_5) and two methyl groups (CH_3) attached to the same carbon atom.
 - (ii) $\text{CH}_3 - \text{O} - \text{CH}_2 - \text{CH}_2 - \text{Cl}$
 4. Arrange the following compounds in order of their increasing boiling points :
Pentan-1-ol, n-Butane, Pentanal, Ethoxyethane.
 5. Name the method used for the refining of Titanium.
 6. The density of an element is 10.5 g cm^{-3} . The length of edge of unit cell is 409 pm. Predict the type of cubic unit cell of the element. Atomic mass of element = $M = 108\text{U}$.
 7.
 - (i) Why is an increase in temperature observed on mixing chloroform and acetone ?
 - (ii) Why does sodium chloride solution freeze at a lower temperature than water ?

- (i) Temperature increases at constant pressure.
 - (ii) Pressure increases at constant temperature.
- (b) Define peptization.
14. Write structure of monomers of following polymers :
- (a) Nylon 6, 6
 - (b) PHBV
 - (c) Dacron
15. Give one example for each of following :
- (i) An artificial sweetener whose use is limited to cold drinks
 - (ii) An anionic detergent
 - (iii) A chemical substance which can be used both as antiseptic as well as disinfectant
16. (a) Draw simple Fischer projections of D-glucose.
(b) Distinguish between glycosidic linkage and peptide linkage.
(c) What are anomers ?
17. Give reasons for the following :
- (i) The dipole moment of chlorobenzene is lower than that of cyclohexyl chloride.
 - (ii) Phenols are more acidic than alcohols.
 - (iii) Aniline does not undergo Friedel Craft reactions.
18. How will you carry out following conversions :
- (i) Ethanamine to propanamine
 - (ii) Ethanal to bute-2-enal
 - (iii) Phenol to salicyldehyde
19. An aqueous solution containing 3.12 g of BaCl_2 in 250 g of water is found to boil at 100.0832°C . Calculate the degree of dissociation of BaCl_2 .
- Mol. mass of $\text{BaCl}_2 = 208 \text{ g mol}^{-1}$
 K_b for water = 0.52 k.m
20. Define the following terms :
- (i) Limiting molar conductivity
 - (ii) State Kohlrausch law of independent migration of ions
 - (iii) $\text{Cu}^{2+} + 2\text{e}^- \rightarrow \text{Cu (s)}$
Write Nernst equation for above half cell at 25°C .

21. (i) Write IUPAC name of linkage isomer of $[\text{Cr}(\text{H}_2\text{O})_5(\text{NO}_2)]^{2+}$.
 (ii) Does $[\text{Ni}(\text{CO})_4]$ show geometrical isomerism? Why or why not? Explain on the basis of valence bond theory.
22. Examine the defective crystal lattice given below and answer the questions :

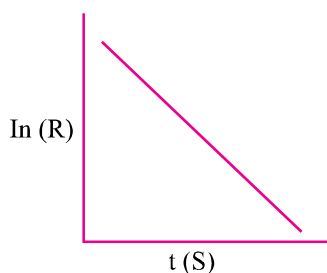


- (i) Name the crystal defect present in ionic solid.
- (ii) Out of AgCl and NaCl which is most likely to show this type of defect and why?
- (iii) Why melting point of *p*-dichlorobenzene is higher than that of *o*-dichlorobenzene?
23. In a slum area, a large number of people fell ill after drinking liquor sold by a local vendor. Many people started vomiting, some complained of not being able to see properly and some other were unconscious. Ramesh's father also suffered from severe stomach ache after consuming liquor. Ramesh clam down his mother and helped her to call ambulance for his father and also for other people. He also informed the police about the incident.
- (i) Mention the values shown by Ramesh.
- (ii) Write the probable cause of poisoning by liquor.
- (iii) Write the reaction showing conversion of molasses to ethyl alcohol using yeast.
- (iv) What is denatured alcohol?
24. (a) Explain the following :
- (i) Ce^{4+} in aqueous solution is a good oxidizing agent.
- (ii) Zn , Cd , Hg are soft and have low melting points.
- (iii) Actinoids contraction is greater from element to element than lanthanoid contraction.
- (b) Write chemical equation for following :
- (i) Pyrolusite is fused with KOH in presence of air.
- (ii) Oxidation of Fe^{2+} ion by $\text{Cr}_2\text{O}_7^{2-}$ in acidic medium.

OR

- (a) Explain the following :
- Cu^+ ion is not stable in aqueous solution.
 - Transition metals and their many compounds act as good catalyst.
 - Why are Mn^{2+} compounds more stable than Fe^{2+} compounds towards oxidation to their + 3 oxidation state ?
- (b) Complete the following chemical equations :
- $\text{MnO}_4^- + \text{C}_2\text{O}_4^{2-} + \text{H}^+ \rightarrow$
 - $\text{Cr}_2\text{O}_7^{2-} + \text{H}_2\text{S} + \text{H}^+ \rightarrow$

25. For a certain chemical reaction, variation in concentration $\ln [R]$ vs time plot is given :

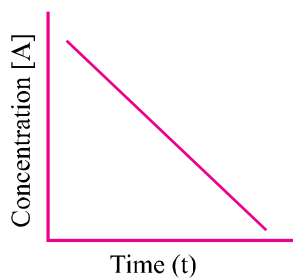


For this reaction :

- What is the order of the reaction ?
- What are the units of rate constant (k) ?
- Write the relationship between rate constant k, time (t), initial concentration R_0 and concentration after time (t), R_t .
- If half-life of the reaction in above case is 20 min., what will be rate constant ?
- Draw the plot of $\text{Log } [R_0]/[R]$ vs time t (s).

OR

Consider the reaction $\text{R} \xrightarrow{k} \text{P}$. The change in concentration of A with time is shown in plot.



- (i) Predict the order of the reaction.
 - (ii) Derive the expression for the time required for the completion of the reaction.
 - (iii) What does the slope of the above line indicate ?
 - (iv) Draw plot of initial concentration $[A_0]$ and half-life period ($t_{1/2}$) for above reaction.
 - (v) If initial concentration of reaction is 0.1 m and become 0.05 m in 20 min, calculate rate constant.
26. (a) An organic compound A (C_4H_8O) which undergo haloform reaction. A does not give Fehling solution test or silver mirror test. A on reduction gives compound B. B on heating with conc. H_2SO_4 forms C. C on ozonolysis in presence of zinc and water, gives acetaldehyde. Identify A, B, C and complete the reaction.
- (b) How will you distinguish between :
- (i) Benzaldehyde and acetophenone
 - (ii) CH_3NH_2 and $(CH_3)_2NH$
- OR**
- (a) Write mechanism of conversion of ethanol into diethylether, using conc. H_2SO_4 as catalyst.
- (b) How will you distinguish :
- (i) Ethylamine and aniline
 - (ii) Methanol and phenol