



Practice, Learn and Achieve  
Your Goal with Prepp

# DSSSB PRT

Shift 13

Simplifying  
Government Exams



SSC CHSL



IAS EXAM



RRB NTPC



NTSE



CDS



SSC CGL



CBSE UGC NET



IBPS PO



NDA



SBI PO



IBPS CLERK



AFCAT



SSC JE



CTET



CSIR UGC NET



CAPF



IBPS RRB

[www.prepp.in](http://www.prepp.in)



GOVT. OF NCT OF DELHI  
Delhi Subordinate Services Selection Board  
FC-18, Institutional Area, Karkardooma, Delhi – 110092.  
[www.dsssb.delhigovt.nic.in](http://www.dsssb.delhigovt.nic.in)

Test Center Name:	iON Digital Zone iDZ 2 Sector 62
Test Date:	06/10/2018
Test Time:	8:30 AM - 10:30 AM
Subject:	ASSISTANT TEACHER PRIMARY

Section : Mental Ability

Q.1 Select the pair from the options below that shares the same relation as the relation present between the word pair below:

Paper : Pulp :: \_\_\_\_\_ : \_\_\_\_\_

Question ID : 16794317965

- Ans
- 1. Oil : Lamp
  - 2. Grapes : Wood
  - 3. Rubber : : Latex
  - 4. Book : Reader

Q.2 In a certain code language, SCHOOL is written as TEKSTR. How will SUMMER be written in that code language?

Question ID : 16794317971

- Ans
- 1. TWPQJV
  - 2. TWPQIX
  - 3. TWPQJX
  - 4. TWPOJX

Q.3 You are given a statement and three conclusions. Choose the comment about conclusions from the options below:

Question ID : 16794317970

Statement:  
Politicians arrived at the public function in their cars.  
Conclusions:  
I. All politicians are rich.  
II. Politicians have cars.  
III. Politicians came to the public function.

- Ans
- 1. Only conclusion II follows
  - 2. Both conclusions II and III follow
  - 3. Only conclusion I follows
  - 4. Either conclusion I or II follows

Q.4 Choose the alternative that closely resembles the water-image of the below set of letters and numbers.

Question ID : 16794317974

A1D3b

- Ans
- 1. V1D3p
  - 2. p1D3V
  - 3. V1D3P
  - 4. V1D3p

Q.5 In a certain code language, '723' means 'beautiful small toy', '745' means 'big costly toy' and '631' means 'smart small boy'. Which digit in that language means 'beautiful'?

Question ID : 16794317969

Ans

- 1. 7
- 2. 2
- 3. 3
- 4. 5

Q.6 Five students are sitting in a row. Raju is not adjacent to Sudhakar or Anil. Ashwin is not adjacent to Sudhakar. Raju is adjacent to Murali. Murali is in the middle of the row. Considering all this information, we can conclude that Ashwin is sitting adjacent to:

Question ID : 16794317975

- Ans
- 1. Cannot be determined
  - 2. Murali
  - 3. Anil
  - 4. Raju

Q.7 Find the odd one out from the below options:

Question ID : 16794317981

Ans

- 1.
- 2.
- 3.
- 4.

Q.8 Introducing a lady, Varun said, "The son of her only brother is the brother of my wife". How is the lady related to Varun?

Question ID : 16794317968

- Ans
- 1. Mother-in-law
  - 2. His mother's sister
  - 3. The sister of Varun's father-in-law
  - 4. Mother

Q.9 Which letter will be the tenth to the right of the 18<sup>th</sup> letter from the right end of the English alphabets?

Question ID : 16794317967

- Ans
- 1. S
  - 2. R
  - 3. L
  - 4. P

Q.10 You are given a question and two statements I and II. You have to decide whether the data provided in the statements is sufficient to answer the question.

Question ID : 16794317978

Arun ranks 10<sup>th</sup> in his class. How many students are there in his class?

Statements:

- I. His friend got 58<sup>th</sup> rank, which is the last.
- II. Arun's rank from the last is 49<sup>th</sup>.

- Ans
- 1.

Data in statement I alone is sufficient to answer the question

2.

Data in either statement I or statement II alone is sufficient to answer the question

3.

Both the statements I and II are not sufficient to answer the question

4.

Data in statement II alone is sufficient to answer the question

**Q.11** Read the following information carefully and answer the question given below:

Question ID : 16794317982

Following are the alternative eligibility criteria for short-listing candidates for interview for an entry-level job in a private bank:

- (i) The candidate should have passed SSC with at least 75% marks.
- (ii) The candidate should have passed HSC with at least 65% marks.
- (iii) The candidate should be a/an Arts/Science/Commerce graduate with at least 55% marks.
- (iv) The candidate should be a professor with at least 75% marks.
- (v) The candidate should be post graduate in any discipline with at least 50% marks.

Any candidate can be eligible under any one or more of the above criteria depending upon his/her academic pursuits.

In following question, details of one candidate are given. You have to find out under which the above conditions the candidate is eligible and mark your answer accordingly based on the alternatives provided after the given question.

Nirmala has secured 75% marks in graduation in Science. She has also secured 60% and 75% marks in HSC and post-graduate exams respectively. She is presently pursuing her second post-graduation degree

- Ans**
- 1. Eligible under (ii), (iii) and (iv) only
  - 2. Eligible under (ii), (iv) and (v) only
  - 3. Eligible under (i) and (v) only
  - 4. Eligible under (iii) and (v) only

**Q.12** A cube, whose two adjacent faces are coloured, is cut into 64 identical small cubes. How many of these small cubes are not coloured at all?

Question ID : 16794317979

- Ans**
- 1. 32
  - 2. 16
  - 3. 36
  - 4. 48

**Q.13** Read the following information carefully and answer the question given below.

Question ID : 16794317972

The sum of the incomes of Anitha and Punitha is more than that of Kavi and Mala taken together. The sum of the incomes of Anitha and Kavi is same as that of Punitha and Mala taken together. Moreover, Anitha earns half as much as the sum of the incomes of Punitha and Mala. Whose income is the highest?

- Ans**
- 1. Punitha
  - 2. Mala
  - 3. Anitha
  - 4. Kavi

**Q.14** The sum of two numbers is 14 and the difference of their squares is 112. Find those numbers.

Question ID : 16794317977

- Ans**
- 1. 2 and 12
  - 2. 3 and 11
  - 3. 10 and 4
  - 4. 9 and 5

**Q.15** Read the following information carefully and answer the question given below:

Question ID : 16794317973

M \* N means 'M is the sister of N'  
M % N means 'M is the father of N'  
M # N means 'M is the mother of N'

- Ans**
- 1. N % R \* M
  - 2. N \* M % S # R



✓ 3.  $N * M \% R$

✗ 4.  $R * M \# N$

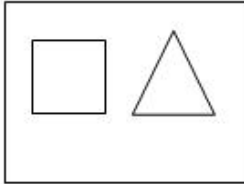
Q.16 Which of the four alternative figures has the same properties as the figure given below?

Question ID : 16794317966



Ans

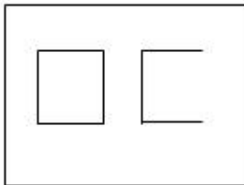
✗ 1.



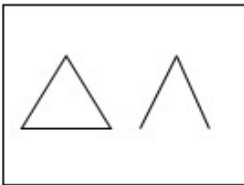
✓ 2.



✗ 3.



✗ 4.



Q.17 Find the odd one out of the below options:

Question ID : 16794317964

Ans ✓ 1. Sand

✗ 2. Skirt

✗ 3. Shirt

✗ 4. Blouse

Q.18 You are alone in your house and there is a danger of thieves around. You hear a knock on the door. What should be your most logical action?

Question ID : 16794317980

Ans ✗ 1. Not to open the door

✓ 2.

First peep out of the window to confirm whether you know the person at the door

✗ 3. Open the door to see who is there

✗ 4. Ask the servant to see who is there

Q.19 Three friends, Vinita, Mira and Neethu, had lunch at a hotel. When the bill was received, Vinita paid  $\frac{2}{3}$  as much as Mira paid and Mira paid  $\frac{1}{2}$  as much as Neethu paid. What fraction of the bill did Mira pay?

Question ID : 16794317976

Ans ✗ 1.  $\frac{5}{7}$

2.  $\frac{2}{13}$

3.  $\frac{9}{11}$

4.  $\frac{3}{11}$

Q.20 Find the number that will come next in the below series:

Question ID : 16794317983

2, 5, 10, 17, 26, 37, 50, 65, 82, \_\_\_\_\_

Ans  1. 101

2. 99

3. 100

4. 110

Section : General Awareness

Q.1 The classical language of India Sanskrit is a derivative of which of the following languages?

Question ID : 16794317987

Ans  1. Indo-Aryan languages

2. Vedic Sanskrit language

3. Prakrit language

4. Rig Vedic language

Q.2 Who was the founder of Atmiya Sabha?

Question ID : 16794317989

Ans  1. Raja Rammohan Roy

2. Keshab Chandra Sen

3. Debendra nath Tagore

4. Raja Radhakant Deb

Q.3 Manu Bhaker is associated with \_\_\_\_\_.

Question ID : 16794318003

Ans  1. Table Tennis

2. Swimming

3. Shooting

4. Judo

Q.4 Tista river originates from \_\_\_\_\_.

Question ID : 16794317991

Ans  1. Chotanagpur Plateau

2. Amarkantak Plateau

3. Darjeeling hills

4. Cholamu lake

Q.5 The 73rd amendment Act to provide constitutional status to provide constitutional status to the Panchayat Raj institutions was brought into force in:

Question ID : 16794317985

- Ans
- 1. May, 1993
  - 2. June, 1993
  - 3. March, 1993
  - 4. April, 1993

Q.6 India comprises how many states and union territories?

Question ID : 16794317984

- Ans
- 1. 25 states and 5 Union territories
  - 2. 29 states and 7 Union territories
  - 3. 26 states and 5 Union territories
  - 4. 28 states and 7 Union territories

Q.7 Moon Jae-In is the President of \_\_\_\_\_.

Question ID : 16794318002

- Ans
- 1. South Korea
  - 2. Cambodia
  - 3. Laos
  - 4. Japan

Q.8 Who was the founder of the Slave dynasty?

Question ID : 16794317988

- Ans
- 1. Behram Shah
  - 2. Giyasuddin Balban
  - 3. Qutbuddin Aibak
  - 4. Shamsuddin Iltutmish

Q.9 What is the literacy rate of Goa?

Question ID : 16794317990

- Ans
- 1. 86.0%
  - 2. 87.1%
  - 3. 88.7%
  - 4. 87.2%

Q.10 What does CPI-IW stands for:

Question ID : 16794317994

- Ans
- 1. Costumer Price Index for the industrial workers
  - 2. Costumer Price Index for the integrated workers
  - 3. Costumer Price Index for the index workers
  - 4. Costumer Price Index for the inland workers

Q.11 In which of the following articles the emoluments and allowances of the President has mentioned?

Question ID : 16794317986

- Ans
- 1. Article 59(3)
  - 2. Article 56

3. Article 65

4. Article 59(1)

Q.12 The Industrial development in India started after \_\_\_\_\_.

Question ID : 16794317992

Ans  1. 1857

2. 1856

3. 1855

4. 1854

Q.13 How many permanent members are in BRICS?

Question ID : 16794317999

Ans  1. 5

2. 8

3. 4

4. 6

Q.14 What is the Minimum support price of Paddy (common variety) in 2018-2019 season?

Question ID : 16794317995

Ans  1. 1775

2. 1700

3. 1750

4. 1725

Q.15 Which of the following is absent in Frog?

Question ID : 16794317996

Ans  1. Tympanum

2. Neck

3. Eye lids

4. Eyes

Q.16 Which of the following countries has hosted the Asian Games, 2018?

Question ID : 16794318001

Ans  1. Malaysia

2. Cambodia

3. Indonesia

4. Phillipines

Q.17 Which of the following statements about Gross domestic products (GDP) is correct?

Question ID : 16794317993

1. The value of final goods and services produced within the boundary and trans -boundary of a country during one-year period.
2. The calendar year is from 1<sup>st</sup> April to 31<sup>st</sup> march.

Ans  1. 1 only

2. 1 and 2 both

3. 2 only

4. Neither 1 nor 2

Q.18 Plastic bottles are formed from the chemical substance \_\_\_\_\_.

Question ID : 16794317997

Ans



- 1. Methyl Terephthalate Ester
- 2. Polymethylene Terephthalate Polyester
- 3. Ethyl Terephthalate Polyester
- 4. Polyethylene Terephthalate Polyester

Q.19 Golden Rice contains high amount of \_\_\_\_\_.

Question ID : 16794317998

- Ans
- 1. Vitamin D
  - 2. Vitamin A
  - 3. Vitamin B
  - 4. Vitamin C

Q.20 What is the acronym of NRC?

Question ID : 16794318000

- Ans
- 1. National Records of Citizens
  - 2. National Rights of Citizens
  - 3. National Register of Citizens
  - 4. National Regulation of Citizens

Section : Arithmetic Ability

Q.1 The marked price of an article is ₹ 4500. It is sold at successive discounts of 20% and x%. If selling price of the article is ₹ 3060. What is the value of x?

Question ID : 16794318014

- Ans
- 1. 12%
  - 2. 15%
  - 3. 8%
  - 4. 10%

Q.2 The unit digit in  $(4)^{31} + (36)^{81} - (243)^{26}$  is:

Question ID : 16794318005

- Ans
- 1. 9
  - 2. 4
  - 3. 1
  - 4. 3

Q.3 What is the sum of digits of the least number which should be added to 13896 to make it perfect cube?

Question ID : 16794318006

- Ans
- 1. 10
  - 2. 21
  - 3. 8
  - 4. 19

Q.4 The difference between mean proportion and third proportion of 3 and 12 is:

Question ID : 16794318011

- Ans
- 1.  $\frac{21}{4}$
  - 2. 30

✓ 3. 42

✗ 4. 24

Q.5 The value of  $1.\bar{3} + 0.6\bar{9} - 0.5\bar{2}3$  is equal to:

Question ID : 16794318007

Ans ✗ 1.  $1.5\bar{5}6$

✗ 2.  $1.4\bar{1}1$

✓ 3.  $1.5\bar{1}0$

✗ 4.  $1.5\bar{2}3$

Q.6 The difference between compound interest and simple interest on ₹ 4800 for 2 years is ₹ 17.28. What is the rate of interest per annum?

Question ID : 16794318015

Ans ✗ 1. 8%

✓ 2. 6%

✗ 3. 10%

✗ 4. 5%

Q.7 The efficiency of A, B and C are in the ratio 4 : 5 : 6. They can together complete a work in 20 days. In how many days, A alone will complete that work?

Question ID : 16794318018

Ans ✗ 1. 50

✗ 2. 40

✓ 3. 75

✗ 4. 60

Q.8 ₹ 12960 is divided among A, B and C such that 4 times share of A is equal to 6 times share of B and also equal to 3 times share of C. How much did A get?

Question ID : 16794318010

Ans ✗ 1. ₹ 5280

✗ 2. ₹ 5760

✗ 3. ₹ 3920

✓ 4. ₹ 4320

Q.9 A boat can travel 15 km upstream and 18 km downstream in 4 hours. Also, it can go 18 km upstream and 15 km downstream in 4 hours 15 minutes. What is the speed of boat in still water?

Question ID : 16794318020

Ans ✗ 1. 12 km/h

✓ 2. 9 km/h

✗ 3. 8 km/h

✗ 4. 10 km/h

Q.10 Reena gave 20% of the money she had to Rita. Rita spent 25% of the money received on school fee, 40% on buying books. If she is left with ₹ 1680, how much money Reena had initially?

Question ID : 16794318012

Ans ✗ 1. ₹ 20000

✗ 2. ₹ 22000

✗ 3. ₹ 18000

✓ 4. ₹ 24000

Q.11 A train covers 40 km in 45 minutes and next 60 km in 80 minutes. What is its average speed for whole journey in km/h?

Question ID : 16794318021

Ans ✓ 1. 48

✗ 2. 54

3. 30

4. 60

Q.12 8 men working 9 hours a day can complete 2 units of work in 20 days. In how many days can 6 men working 10 hours a day to complete 3 unit of work?

Question ID : 16794318019

Ans  1. 36

2. 24

3. 40

4. 30

Q.13 The sides of a triangle are 6 cm, 8 cm, and 10 cm. Circles of radius 1 cm are down at each of its vertex. What is the area of the triangle excluding the portion covered by the sectors of the circles? ( $\pi = 3.14$ )

Question ID : 16794318016

Ans  1.  $20.86 \text{ cm}^2$

2.  $22.95 \text{ cm}^2$

3.  $21.32 \text{ cm}^2$

4.  $22.43 \text{ cm}^2$

Q.14 By selling 30 articles a person gains cost price of 5 articles. What is his gain percent?

Question ID : 16794318013

Ans  1.  $\frac{120}{7} \%$

2.  $\frac{50}{3} \%$

3.  $\frac{100}{7} \%$

4.  $\frac{70}{3} \%$

Q.15 The H.C.F of two numbers is 17 and their product is 4624. What is the sum of their reciprocals?

Question ID : 16794318008

Ans  1.  $\frac{1}{272}$

2.  $\frac{1}{289}$

3.  $\frac{1}{17}$

4.  $\frac{1}{16}$

Q.16 The value of  $\frac{(369+731)^2 - (369-731)^2}{36.9 \times 73.1}$  is equal to:

Question ID : 16794318004

Ans  1. 40

2. 20

3. 200

4. 400

Q.17

The average weight of students in a class is 45kg. When 4 new students whose weights are 42 kg, 36.5 kg, 57.5 kg and 40 kg are admitted, the average weight decreases by 0.75 kg. What is the number of students in the class now?

Question ID : 16794318009

- Ans
- 1. 32
  - 2. 35
  - 3. 30
  - 4. 28

Q.18 The radius of a sphere is increased by 120%. What is percent increase in its volume?

Question ID : 16794318017

- Ans
- 1. 964.8%
  - 2. 40.49%
  - 3. 728%
  - 4. 72.8%

**Comprehension:**

The following tables gives the marks obtained by students in a test out of 50 marks.

Class interval of Marks	0-10	10-20	20-30	30-40	40-50
No. of students	5	10	20	25	10

Read the table and answer following questions

SubQuestion No : 19

Q.19 What is the mean mark obtained by students?

Question ID : 16794318023

- Ans
- 1.  $\frac{198}{7}$
  - 2.  $\frac{192}{7}$
  - 3.  $\frac{200}{7}$
  - 4.  $\frac{195}{7}$

**Comprehension:**



The following tables gives the marks obtained by students in a test out of 50 marks.

Class interval of Marks	0-10	10-20	20-30	30-40	40-50
No. of students	5	10	20	25	10

Read the table and answer following questions

SubQuestion No : 20

Q.2 If above information is represented as pie chart, what is the central angle of the sector represents the number of students getting marks more than 40 correct to nearest whole degree?

Question ID : 16794318024

- Ans
- 1.  $62^\circ$
  - 2.  $26^\circ$
  - 3.  $51^\circ$
  - 4.  $58^\circ$

Section : General English

Q.1 Which sentence is most appropriate grammatically?

Question ID : 16794318027

Ans  1.

I went to the grocer and I bought some toffees or I dropped them on the way home.

2.

I went to the grocer but I bought some toffees and I dropped them on the way home.

3.

I went to the grocer and I bought some toffees but I dropped them on the way home.

4.

I went to the grocer and I bought some toffees and I dropped them on the way home.

Q.2 Provide the appropriate antonym for the underlined word in the sentence given below:

Question ID : 16794318036

The currency recovered was counterfeit.

Ans  1. rapid

- 2. improper
- 3. unsuitable
- 4. valid

Q.3 Provide the appropriate question tag for the question given below:

Question ID : 16794318031

We must lock the gate, \_\_\_\_\_

- Ans
- 1. mustn't we?
  - 2. shouldn't we?
  - 3. oughtn't we?
  - 4. mustn't they?

Q.4 Fill in the blank with the most appropriate option.

Question ID : 16794318039

I did not have the correct visa. \_\_\_\_\_, I could not enter Romania.

- Ans
- 1. because
  - 2. consequently
  - 3. even though
  - 4. although

Q.5 Provide the appropriate synonym for the underlined word in the sentence given below:

Question ID : 16794318033

The object hovered over us.

- Ans
- 1. waned
  - 2. rejected
  - 3. declined
  - 4. floated

Q.6 Provide the appropriate antonym for the underlined word in the sentence given below:

Question ID : 16794318037

His conventional methods were appreciated.

- Ans
- 1. plain
  - 2. uncommon
  - 3. nonexistent
  - 4. run-of-the-mill

Q.7 Provide the appropriate synonym for the underlined word in the sentence given below:

Question ID : 16794318034

The boys strolled across the hall.

- Ans
- 1. galloped
  - 2. stopped
  - 3. wandered
  - 4. stooped

Q.8 Provide the appropriate synonym for the underlined word in the sentence given below:

Question ID : 16794318032

She will initiate the process.

Ans

- 1. Intimate
- 2. Commence
- 3. Discontinue
- 4. Conclude

Q.9 Fill in the blank with the most appropriate option.

Question ID : 16794318028

What would you do if it \_\_\_\_\_ on the day of your engagement?

- Ans
- 1. would rain
  - 2. rained
  - 3. will rain
  - 4. rain

Q.10 One of the options from below is a complete sentence. Identify it.

Question ID : 16794318025

- Ans
- 1. He shut the door
  - 2. Bread and Butter
  - 3. Now and then
  - 4. The child in bed

Q.11 Fill in the blank with the most appropriate option.

Question ID : 16794318038

Mani lives in New York, \_\_\_\_\_ his brother lives in California.

- Ans
- 1. while
  - 2. unless
  - 3. if
  - 4. despite

Q.12 Choose a suitable ending for this sentence.

Question ID : 16794318026

He sprinted all the way but \_\_\_\_\_.

- Ans
- 1. he caught a cold
  - 2. he caught the bus
  - 3. he laughed
  - 4. he missed the bus

Q.13 Fill in the blank with the most appropriate option.

Question ID : 16794318029

My little nephew dislikes \_\_\_\_\_ his hair brushed.

- Ans
- 1. to had
  - 2. having
  - 3. have
  - 4. had

Q.14 Provide the appropriate antonym for the underlined word in the sentence given below:

Question ID : 16794318035

His colossal frame stood out among the contestants.

- Ans
- 1. ample
  - 2. petite
  - 3. veteran
  - 4. broad

Q.15 "Where is it?" said Maria. The reported speech of this sentence is:  
Maria \_\_\_\_\_

Question ID : 16794318030

- Ans
- 1. asked where it was.
  - 2. said where it is.
  - 3. asked whether it was there.
  - 4. asked if it was there.

Comprehension:

Provide the appropriate tense form the verbs in brackets.

Anjali \_\_\_\_\_ (lose) her keys. She doesn't have them with her now. Robin too \_\_\_\_\_ (misplace) his keys, but presently has the keys in his pocket. Many of our friends \_\_\_\_\_ (forget) stuff. While you are reading this passage, many people \_\_\_\_\_ (try) to find ways to get rid of this problem. It \_\_\_\_\_ (become) a universal problem with stress being a major cause for it.

SubQuestion No : 16

Q.1  
6 become

Question ID : 16794318045

- Ans
- 1. have become
  - 2. became
  - 3. has become
  - 4. will become

Comprehension:

Provide the appropriate tense form the verbs in brackets.

Anjali \_\_\_\_\_ (lose) her keys. She doesn't have them with her now. Robin too \_\_\_\_\_ (misplace) his keys, but presently has the keys in his pocket. Many of our friends \_\_\_\_\_ (forget) stuff. While you are reading this passage, many people \_\_\_\_\_ (try) to find ways to get rid of this problem. It \_\_\_\_\_ (become) a universal problem with stress being a major cause for it.

SubQuestion No : 17

Q.1  
7 lose

Question ID : 16794318041

- Ans
- 1. lost



2. has been losing

3. has lost

4. loose

Comprehension:

Provide the appropriate tense form the verbs in brackets.

Anjali \_\_\_\_\_ (lose) her keys. She doesn't have them with her now. Robin too \_\_\_\_\_ (misplace) his keys, but presently has the keys in his pocket. Many of our friends \_\_\_\_\_ (forget) stuff. While you are reading this passage, many people \_\_\_\_\_ (try) to find ways to get rid of this problem. It \_\_\_\_\_ (become) a universal problem with stress being a major cause for it.

SubQuestion No : 18

Q.1  
8 try

Question ID : 16794318044

Ans  1. try

2. have been trying

3. are trying

4. tried

Comprehension:

Provide the appropriate tense form the verbs in brackets.

Anjali \_\_\_\_\_ (lose) her keys. She doesn't have them with her now. Robin too \_\_\_\_\_ (misplace) his keys, but presently has the keys in his pocket. Many of our friends \_\_\_\_\_ (forget) stuff. While you are reading this passage, many people \_\_\_\_\_ (try) to find ways to get rid of this problem. It \_\_\_\_\_ (become) a universal problem with stress being a major cause for it.

SubQuestion No : 19

Q.1  
9 forget

Question ID : 16794318043

Ans  1. forgot

2. Has forgotten

3. forget

4. Forgotten

Comprehension:

## Coaching Available for All Types of Teaching Exams: CTET, KVS, DSSSB

Provide the appropriate tense form the verbs in brackets.

Anjali \_\_\_\_\_ (lose) her keys. She doesn't have them with her now. Robin too \_\_\_\_\_ (misplace) his keys, but presently has the keys in his pocket. Many of our friends \_\_\_\_\_ (forget) stuff. While you are reading this passage, many people \_\_\_\_\_ (try) to find ways to get rid of this problem. It \_\_\_\_\_ (become) a universal problem with stress being a major cause for it.

SubQuestion No : 20

Q.2  
0 misplace

Question ID : 16794318042

- Ans
- 1. Has misplaced
  - 2. misplaced
  - 3. have misplaced
  - 4. misplacing

Section : General Hindi

Comprehension:

नीचे दिये गए गद्यांश को पढ़कर पूछे गये प्रश्नों के उत्तर दीजिए।

रामचंद्र शुक्ल के निबंध पं महावीरप्रसाद द्विवेदी द्वारा संपादित सरस्वती में छपने लगे थे। उन्होंने निबंध में प्रस्तुत सूत्रों की उपमा पत्ते की नसों से दी है, जो परस्पर गुँथी होती हैं। शुक्ल जी के अधिकांश प्रसिद्ध निबंध मनोविकारों पर हैं। उन्होंने भारतेन्दु, प्रेमघन, फ्रेडरिक पिंकाट पर भी लिखा है, लेकिन वे या तो व्यक्तित्व कृतित्व का परिचय देने वाले हैं, या संस्मरण या जीवनी परक। निबंधकार के रूप में शुक्ल जी का योगदान मनोविकार संबंधी निबंधों के कारण है। इन निबंधों का संग्रह पहले विचार-वीथी के नाम से 1930 ई में प्रकाशित हुआ था। बाद में चिन्तामणि (पहला भाग) नाम से 1939 ई में परिवर्धित और संशोधित संस्करण प्रकाशित हुआ।

SubQuestion No : 1

Q.1 गद्यांश में शुक्ल जी के किस रूप का उल्लेख है?

Question ID : 16794318051

- Ans
- 1. कथाकार
  - 2. निबंधकार
  - 3. कवि

4. नाटककार

Comprehension:

नीचे दिये गए गद्यांश को पढ़कर पूछे गये प्रश्नों के उत्तर दीजिए।

रामचंद्र शुक्ल के निबंध पं महावीरप्रसाद द्विवेदी द्वारा संपादित सरस्वती में छपने लगे थे। उन्होंने निबंध में प्रस्तुत सूत्रों की उपमा पत्ते की नसों से दी है, जो परस्पर गुँथी होती हैं। शुक्ल जी के अधिकांश प्रसिद्ध निबंध मनोविकारों पर हैं। उन्होंने भारतेन्दु, प्रेमघन, फ्रेडरिक पिंकाट पर भी लिखा है, लेकिन वे या तो व्यक्तित्व कृतित्व का परिचय देने वाले हैं, या संस्मरण या जीवनी परक। निबंधकार के रूप में शुक्ल जी का योगदान मनोविकार संबंधी निबंधों के कारण है। इन निबंधों का संग्रह पहले विचार-वीथी के नाम से 1930 ई में प्रकाशित हुआ था। बाद में चिन्तामणि (पहला भाग) नाम से 1939 ई में परिवर्धित और संशोधित संस्करण प्रकाशित हुआ।

SubQuestion No : 2

Q.2 सरस्वती के संपादक कौन थे?

Question ID : 16794318047

- Ans
- 1. महावीर प्रसाद द्विवेदी
  - 2. रामचन्द्र शुक्ल
  - 3. जयशंकर प्रसाद
  - 4. हजारी प्रसाद द्विवेदी

Comprehension:

नीचे दिये गए गद्यांश को पढ़कर पूछे गये प्रश्नों के उत्तर दीजिए।

रामचंद्र शुक्ल के निबंध पं महावीरप्रसाद द्विवेदी द्वारा संपादित सरस्वती में छपने लगे थे। उन्होंने निबंध में प्रस्तुत सूत्रों की उपमा पत्ते की नसों से दी है, जो परस्पर गुँथी होती हैं। शुक्ल जी के अधिकांश प्रसिद्ध निबंध मनोविकारों पर हैं। उन्होंने भारतेन्दु, प्रेमघन, फ्रेडरिक पिंकाट पर भी लिखा है, लेकिन वे या तो व्यक्तित्व कृतित्व का परिचय देने वाले हैं, या संस्मरण या जीवनी परक। निबंधकार के रूप में शुक्ल जी का योगदान मनोविकार संबंधी निबंधों के कारण है। इन निबंधों का संग्रह पहले विचार-वीथी के नाम से 1930 ई में प्रकाशित हुआ था। बाद में चिन्तामणि (पहला भाग) नाम से 1939 ई में परिवर्धित और संशोधित संस्करण प्रकाशित हुआ।

SubQuestion No : 3

Q.3 चिन्तामणि (पहला भाग) कब प्रकाशित हुआ?

Question ID : 16794318050

- Ans
- ✓ 1. 1939 ई
  - ✗ 2. 1933 ई
  - ✗ 3. 1930 ई
  - ✗ 4. 1936 ई

Comprehension:



नीचे दिये गए गद्यांश को पढ़कर पूछे गये प्रश्नों के उत्तर दीजिए।

रामचंद्र शुक्ल के निबंध पं महावीरप्रसाद द्विवेदी द्वारा संपादित सरस्वती में छपने लगे थे। उन्होंने निबंध में प्रस्तुत सूत्रों की उपमा पत्ते की नसों से दी है, जो परस्पर गुँथी होती हैं। शुक्ल जी के अधिकांश प्रसिद्ध निबंध मनोविकारों पर हैं। उन्होंने भारतेन्दु, प्रेमघन, फ्रेडरिक पिंकाट पर भी लिखा है, लेकिन वे या तो व्यक्तित्व कृतित्व का परिचय देने वाले हैं, या संस्मरण या जीवनी परक। निबंधकार के रूप में शुक्ल जी का योगदान मनोविकार संबंधी निबंधों के कारण है। इन निबंधों का संग्रह पहले विचार-वीथी के नाम से 1930 ई में प्रकाशित हुआ था। बाद में चिन्तामणि (पहला भाग) नाम से 1939 ई में परिवर्धित और संशोधित संस्करण प्रकाशित हुआ।

SubQuestion No : 4

Q.4 शुक्ल जी के अधिकांश निबंध किससे सम्बंधित हैं:

Question ID : 16794318048

- Ans
- 1. समाजशास्त्र
  - 2. दर्शन
  - 3. मनोविकार
  - 4. इतिहास

Comprehension:

नीचे दिये गए गद्यांश को पढ़कर पूछे गये प्रश्नों के उत्तर दीजिए।

रामचंद्र शुक्ल के निबंध पं महावीरप्रसाद द्विवेदी द्वारा संपादित सरस्वती में छपने लगे थे। उन्होंने निबंध में प्रस्तुत सूत्रों की उपमा पत्ते की नसों से दी है, जो परस्पर गुँथी होती हैं। शुक्ल जी के अधिकांश प्रसिद्ध निबंध मनोविकारों पर हैं। उन्होंने भारतेन्दु, प्रेमघन, फ्रेडरिक पिंकाट पर भी लिखा है, लेकिन वे या तो व्यक्तित्व कृतित्व का परिचय देने वाले हैं, या संस्मरण या जीवनी परक। निबंधकार के रूप में शुक्ल जी का योगदान मनोविकार संबंधी निबंधों के कारण है। इन निबंधों का संग्रह पहले विचार-वीथी के नाम से 1930 ई में प्रकाशित हुआ था। बाद में चिन्तामणि (पहला भाग) नाम से 1939 ई में परिवर्धित और संशोधित संस्करण प्रकाशित हुआ।

SubQuestion No : 5

Q.5 शुक्ल जी के निबंधों का संग्रह पहले किस नाम से प्रकाशित हुआ था?

Question ID : 16794318049

- Ans
- 1. विचार सागर
  - 2. चिन्तामणि
  - 3. विचार-वीथी
  - 4. चिन्ता सागर

Q.6 'बखूबी' में कौन सा समास है?

Question ID : 16794318058

- Ans
- 1. अव्ययीभाव
  - 2. तत्पुरुष
  - 3. द्विगु
  - 4. द्वंद्व

Q.7 'गोद में स्थान पाया हुआ' के लिए एक शब्द होगा:

Question ID : 16794318064

- Ans
- 1. अंकशायी
  - 2. अंकस्थ
  - 3. अंडज
  - 4. पाल्य

Q.8

'आग्नेय' में प्रत्यय है:

- Ans
- 1. एय
  - 2. य
  - 3. नेय
  - 4. अय

Q.9 निम्न में कौन सा शब्द वर्तनी की दृष्टि से शुद्ध है?

Question ID : 16794318066

- Ans
- 1. पूर्णीमा
  - 2. पुर्णिमा
  - 3. पूर्णिमा
  - 4. पुर्णीमा

Q.10 'अभ्यागत' का संधि विच्छेद होगा:

Question ID : 16794318057

- Ans
- 1. अभि + आगत
  - 2. अभ्य + गत
  - 3. अभ्या + गत
  - 4. अभि + गत

Q.11 'नया' किस प्रकार का विशेषण है?

Question ID : 16794318056

- Ans
- 1. सार्वनामिक
  - 2. संख्यावाचक
  - 3. गुणवाचक
  - 4. परिमाण बोधक

Q.12 निम्न में से कौन सा शब्द स्त्रीलिंग है?

Question ID : 16794318059

- Ans
- 1. हकीकत
  - 2. हड़कम्प
  - 3. हुंकार
  - 4. हक

Q.13 'आगत' का विलोम होगा:

Question ID : 16794318063

- Ans
- 1. गत
  - 2. स्वागत
  - 3. अनागत
  - 4. विगत

Q.14 'धन के रहित जीवन व्यर्थ है।' वाक्य में अशुद्ध अंश है:

Question ID : 16794318065

- Ans
- 1. व्यर्थ
  - 2. धन के रहित
  - 3. जीवन
  - 4. है।

Q.15 निम्न में तत्सम शब्द कौन सा है?

Question ID : 16794318052

- Ans
- 1. लवण
  - 2. नेवला
  - 3. नीम
  - 4. नीबू

Q.16 निम्न में कौन सा शब्द देशज है?

Question ID : 16794318054

- Ans
- 1. अफसोस
  - 2. तेंदुआ
  - 3. अपील
  - 4. अदा

Q.17 'शीतलता' किस प्रकार की संज्ञा है?

Question ID : 16794318055

- Ans
- 1. भाववाचक
  - 2. जातिवाचक
  - 3. व्यक्तिवाचक
  - 4. पदार्थवाचक

Q.18 'संकल्प' में उपसर्ग है?

Question ID : 16794318060

- Ans
- 1. कल्प
  - 2. सन्
  - 3. स
  - 4. सम्

Q.19 निम्न में कौन सा शब्द तद्भव है?

Question ID : 16794318053

- Ans
- 1. ताम्र
  - 2. शिथिल
  - 3. तलवार
  - 4. धृष्ट

Q.20



'अनुपम' का पर्याय नहीं है:

- Ans
- 1. मनोहर
  - 2. अनोखा
  - 3. अपूर्व
  - 4. अनूठा

Section : Subject Related

Q.1 What is the definition of cognition?

Question ID : 16794318075

- Ans
- 1. The process of acquiring and understanding knowledge through our thoughts, experience and senses
  - 2. The process of biological and psychological changes
  - 3. Developing attitude and interest
  - 4. Structural and physiological changes

Q.2 What are the major characteristics and developmental changes that are found/occur in the children in the age group of 2 to 7 years?

Question ID : 16794318071

- Ans
- 1. Children learn about the world through basic actions such as suckling, grasping
  - 2. Children begin to think symbolically, and use words and pictures to represent objects
  - 3. Children begin to understand the concept of conservation
  - 4. Abstract thoughts emerge in children

Q.3 What do you understand by school culture?

Question ID : 16794318086

- Ans
- 1. It refers to the beliefs, perceptions, relationships, attitudes and written and unwritten rules
  - 2. It refers to the social competencies and skills
  - 3. It refers to the resources and information that help the student to be socially competent
  - 4. It refers to the interaction with the peer in school

Q.4 What does cognitive domain involve?

Question ID : 16794318078

- Ans
- 1. Mental skills
  - 2. Physical growth
  - 3. Manual or physical skills
  - 4. Growth in feelings or emotional areas

Q.5 What do you mean by secondary socialisation?

Question ID : 16794318084

Ans  1.

It refers to the growing child who learns very important lesson in social conduct from his peers

2.

It refers to the process of discarding former behaviour patterns and accepting new ones as a part of transition in one's life

3.

It refers to socialisation of the infant in the primary or earliest years of his life

4.

It refers to the process by which men learn the culture of a group with the anticipation of joining the group

Q.6 Who identified four cognitive stages of child development?

Question ID : 16794318068

Ans  1. Skinner

2. Watson

3. Piaget

4. Vygotsky

Q.7 What is child rearing also called?

Question ID : 16794318085

Ans  1. Parenting

2. Adolescence

3. Adulthood

4. Teaching

Q.8 What is maturation?

Question ID : 16794318074

Ans  1. Exercise and effort taken

2. Unfolding of individual's inherent traits

3. Capable of learning

4. Biological and genetically

Q.9 As a teacher, it is necessary for us to understand the easiest way to quantify child poverty by setting an absolute or 'relative monetary threshold'. This 'relative monetary threshold':

Question ID : 16794318072

Ans  1.

Is developed with reference to the actual income of the population and reflects changes in consumption

2.

Is adjusted for family size and composition to determine the population that is living in poverty

3.

Is fixed and generally only updated for price change

4.

US dollar 1 a day to measure poverty in developing country

Q.10 How do we have cultural diversity?

Question ID : 16794318083

Ans  1.

By varying background respond and develop themselves differently

2.

By behaving differently due to educational difference

3.

It is the result of geographical location, religious beliefs, and life style

4.

By virtue of economic knowledge and decision taking in financial matters

Q.11 What is the explanation George Herbert Mead gave for socialisation?

Question ID : 16794318082

Ans  1.

He believed that an individual's social experience was a primary determinant of individual identity, which he called as 'the self'

2.

He believed in the important reaction of others to the developing self-concept, which he called as 'looking-glass self'

3.

He believed that human development is the result of both biological maturation and increasing social experience

4.

He believed that people learn the cultural values and norms that make up a part of the personality that he called superego

Q.12 Is one of the factors that influences how children learn and grow Assimilation means:

Question ID : 16794318073

Ans  1.

Process of taking in new information into our already existing schemas

2.

Changing or altering our existing schemas in light of new information

3.

Moving from one stage of thought to the next

4.

Modifying existing schemas, or ideas, as a result of new information or new experiences

Q.13 Which psychologist gave the three domains of learning?

Question ID : 16794318077

Ans  1. Benjamin Bloom

2. Jean Piaget

3. Vygotsky

4. Chomsky

Q.14 What does development imply?

Question ID : 16794318067

Ans  1. Unfolding of individual's inherent traits

2. Qualitative changes

3. Quantitative changes

4. Increase in height, weight and length

Q.15 What is the meaning of the following expression "learning is product of environment"?

Question ID : 16794318076

Ans  1.

Learning is through the modification and re-modification by the objects and individuals in the environment

2. Learning is the modification of behaviour

3.

Learning is a process that happens through both physical and mental development of the learner

4.

Learning is a process that happens through experiences

Q.16 Which category does this sp



Ans  1. Analysing

Question ID : 16794318079

2. Remembering

3. Creating

4. Evaluating

Q.17 What is prominent for children in the age group of 0 to 2 years?

Question ID : 16794318069

Ans  1. They love to talk and listen

2.

They experience the environment through their senses

3.

They inhibit improvement of verbal ability and develop concepts

4. They acquire a sense of discipline

Q.18 What does this phrase mean: "socialisation is a continuous process"?

Question ID : 16794318081

Ans  1.

Society intends to control the behaviour of its members unconsciously

2.

Members of a society transmit its culture to the next generation and thus society continues to exist

3.

It refers to the knowledge or skill acquired by instruction or study

4.

Children learn their language, customs, norms and values in the family

Q.19 Children's needs are broadly classified into:

Question ID : 16794318070

Ans  1. 3 types

2. 2 types

3. 5 types

4. 4 types

Q.20 The key words 'defines', 'knows', 'labels' and 'lists' belong to which category?

Question ID : 16794318080

Ans  1. Remembering

2. Understanding

3. Applying

4. Evaluating

Section : Subject Related

Q.1 Ramu is a boy with hearing impairment. Somu is a normal boy. Both get enrolled into the same school. What do you call such type of schools?

Question ID : 16794318100

Ans  1. Inclusive schools

2. Special schools

3. Separate schools



4. Vocational schools

Q.2 The process of observation under controlled conditions can be termed as:

Question ID : 16794318103

Ans  1. Interviews

2. Survey

3. Experimentation

4. Ethnography

Q.3 What is the full form of ADHD?

Question ID : 16794318099

Ans  1. Autism Deficit Hyperactivity Disorder

2. Auto Deficit Hyperactivity Disorder

3. Attention Deficit Hyperactive Disorder

4. Attention Deficit High Disease

Q.4 What is epistemology?

Question ID : 16794318102

Ans  1. Theory of knowledge

2. Utility of knowledge

3. Occurrence of knowledge

4. Source of knowledge

Q.5 What do you understand by 'promote the child's mental development'?

Question ID : 16794318087

Ans  1. Interaction, stimulation and play

2.

Interaction within the community, at health clinics, at school

3.

Providing emotional security, socialisation, nurturing and giving affection to the child

4.

Keeping the child safe and free from harm, providing shelter and clothing, preventing and attending to illness

Q.6 What does Educatum mean?

Question ID : 16794318089

Ans  1. To develop

2. To raise

3. To learn

4. To grow

Q.7 What do you refer to the social difference in between men and women as?

Question ID : 16794318093

Ans  1. Cosmological difference

2. Cultural difference

3. Biological difference

4. Gender difference

Q.8

What is the method of socialisation in play-way level school?

Question ID : 16794318088

Ans  1.

Teacher provides the opportunities to improve socialisation by conducting discussions and activities such as mutual understanding with the peer group

2.

There are/is no strict rules/method to learn, but education is learnt by the way of playing

3.

Teacher makes the children learn good habits, civic responsibility and how to mingle with the society

4.

Children learn the skills, which they can use in future to actively participate in co-curricular activities

Q.9 Equitable ratio of men and women represents:

Question ID : 16794318091

Ans  1. Diversity in culture

2. Diversity of education

3. Unity in diversity

4. Gender diversity

Q.10 If the student is unable to walk and talk properly, this is referred to as:

Question ID : 16794318092

Ans  1. Physical disabilities

2. Learning disabilities

3. Loco motor disabilities

4. Mental disabilities

Q.11 What is the expansion of IPC?

Question ID : 16794318095

Ans  1. Indian Penal Code

2. Indian Plastic Code

3. Indian Practice Code

4. International Penal Code

Q.12 Which one of the following is not a common technology used in education?

Question ID : 16794318105

Ans  1. CDs

2. Green boards

3. e-boards

4. Audio tapes

Q.13 Which of the following statements does not relate to curriculum?

Question ID : 16794318101

Ans  1. It is students' experience of learning

2.

It refers to teacher's professional development

3.

It refers to the content of a programme of study

4. It is the structure of a programme of study

Q.14

The difficulty with learning math is called:

Question ID : 16794318098

- Ans
- 1. Dyscalculia
  - 2. Dyspraxia
  - 3. Dysgraphia
  - 4. Dyslexia

Q.15 A preference towards one gender over the other is called as:

Question ID : 16794318096

- Ans
- 1. Gender difference
  - 2. Gender stereotype
  - 3. Gender diversity
  - 4. Gender bias

Q.16 Learning through correspondence is a type of:

Question ID : 16794318090

- Ans
- 1. Life-long education
  - 2. Formal education
  - 3. Informal education
  - 4. Non-formal education

Q.17 What is the full form of IDEA?

Question ID : 16794318097

- Ans
- 1. Indian Developmental Education Act
  - 2. Individuals With Distance Education Act
  - 3. Indian Disability Education Act
  - 4. Individuals With Disabilities Education Act

Q.18 Systematic application of scientific knowledge to the practical tasks is termed as:

Question ID : 16794318106

- Ans
- 1. Philosophy
  - 2. Science
  - 3. Education
  - 4. Technology

Q.19 One of the most personal way of knowing someone could be through:

Question ID : 16794318104

- Ans
- 1. Intuition
  - 2. Some authority
  - 3. Reading
  - 4. Lecture

Q.20 Universal access and enrolment is the important objective of:

Question ID : 16794318094

- Ans
- 1. NPE-1986
  - 2. N.R.E.P
  - 3. NCERT



Section : Subject Related

Q.1 What does CCTV stand for?

Question ID : 16794318110

- Ans
- 1. Centralised Classroom Television
  - 2. Common Class Television
  - 3. Classroom Centered Television
  - 4. Closed Circuit Television

Q.2 How does specific objectives help the teacher?

Question ID : 16794318114

- Ans
- 1. They are end-view of the possible achievement
  - 2. They give direction to the entire educational system
  - 3. They help in the selection of the subject matter and also teaching learning activities
  - 4. They help to go beyond the school programme

Q.3 Why is the second language acquisition in childhood unique?

Question ID : 16794318121

- Ans
- 1. Second language acquisition is the same as First language acquisition
  - 2. Children can speak more than one language
  - 3. Children learn in a native like attainment
  - 4. Second language acquisition is different from first language acquisition

Q.4 What should learning objective identify?

Question ID : 16794318113

- Ans
- 1. Method of teaching
  - 2. Information shared by the teacher
  - 3. A learning outcome
  - 4. The time for learning

Q.5 What is the correct full form of ELT?

Question ID : 16794318115

- Ans
- 1. Expression for Language Teaching
  - 2. English Language Teaching
  - 3. Evaluation of Learning and Teaching
  - 4. English Learning Time

Q.6 The students will be acquainted with the language more easily, lively and interestingly when language is taught using the:

Question ID : 16794318117

Ans



1. Translational approach

2. Situational approach

3. Structural approach

4. Oral approach

Q.7 "Puzzles are also called as brain teasers." Puzzles in mathematics help students in a math class to:

Question ID : 16794318126

Ans  1. Overcome fear of maths

2. Learn the pre-number concepts thoroughly

3. Feel good about maths as a subject

4.

Develop power of thinking and reasoning in the students

Q.8 Who is the most influential exponent of cognitivism?

Question ID : 16794318119

Ans  1. John Dewey

2. Benjamin Bloom

3. Abraham Maslow

4. Jean Piaget

Q.9 What is full form of STM?

Question ID : 16794318122

Ans  1. Standard Time Management

2. Phonological Standard Tense Memory

3.

Standard Technical Measurement of language

4. Phonological Short-Term Memory

Q.10 What is the use of a big book in the classroom?

Question ID : 16794318118

Ans  1.

It helps the children to engage and actively discuss what they think the story is going to be

2.

It is based on a number of theoretical principles

3.

If the book is big, it is easy for the young learners to carry

4.

It has a number of colourful pictures to attract the learners

Q.11 Which of the following is not the characteristic of educational technology?

Question ID : 16794318108

Ans  1.

It is based on application of scientific knowledge

2. It helps making teaching process objective

3.

It encourages learning by controlling the environment

# Coaching Available for All Types of Teaching Exams: CTET, KVS, DSSSB

✓ 4. It makes the teaching process monotonous

Q.12 "Teaching is done in a practical manner which is systematically worked out." Which of the following terms corresponds to the above description?

Question ID : 16794318125

- Ans
- ✗ 1. Drill approach
  - ✗ 2. Incidental approach
  - ✓ 3. Meaningful approach
  - ✗ 4. Social approach

Q.13 How does technology help a teacher in improving teaching?

Question ID : 16794318112

- Ans
- ✗ 1. Communicating with parents
  - ✗ 2. Using TLM in lessons
  - ✗ 3. Maintaining student records
  - ✓ 4. AV recording and reflecting on teaching

Q.14 West's method aims at the development of \_\_\_\_, which is an essential and salient feature of language learning.

Question ID : 16794318116

- Ans
- ✗ 1. grammar skills
  - ✗ 2. reading skills
  - ✗ 3. writing skills
  - ✓ 4. vocabulary

Q.15 What is the academic style of language expected in the classroom context?

Question ID : 16794318123

- Ans
- ✗ 1. Listening to the overload of information from the teacher
  - ✗ 2. Reviewing the input given by the teacher in the classroom
  - ✗ 3. Replying to the questions asked in the class
  - ✓ 4. Interpersonal stance - discussion and negotiation in the class

Q.16 Who is regarded the father of Demonstrative Geometry?

Question ID : 16794318124

- Ans
- ✓ 1. Euclid
  - ✗ 2. P. Samuel
  - ✗ 3. Cunning Ham
  - ✗ 4. Bertrand Russel

Q.17 Use of educational technology is advantageous over many other methods because:

Question ID : 16794318109

- Ans
- ✗ 1. It allows time for thinking
  - ✓ 2. It provides wider range of sensory involvement
  - ✗ 3. It allows proper guidance

4. It provides scope for understanding

Q.18 Which of these technology-aided learning methods could be a good substitute for a field trip?

Question ID : 16794318111

Ans  1. Interactive learning programme

2. Telephonic interviews

3. Web seminar

4. Internet

Q.19 What do children need to learn when they acquire a language?

Question ID : 16794318120

Ans  1. Confidence in speaking of the language

2. Communication skills in the language

3.

Phonology, lexicon, grammar and pragmatics

4.

Complex and powerful system to learn the language

Q.20 Demonstrating close to real life situations is possible through which of the following?

Question ID : 16794318107

Ans  1. Programmed learning

2. Experiments

3. Interactive learning programme

4. Simulated learning

Section : Subject Related

Q.1 The various aspects such as language, technology, economic system, education and various aspects of human civilisation, etc. are collectively called as:

Question ID : 16794318130

Ans  1. Life-assisting environment

2. Social environment

3. Biophysical environment

4. Natural environment

Q.2 "The increasing amount of time children in the age group of eight or nine are now spending on screens means they have shorter attention spans." What do you suggest for the development of children in schools?

Question ID : 16794318142

Ans  1.

Make parents aware of the importance of yoga for their kids.

2.

Replace yoga with physical activities in schools.

3.

Introduce yoga and mindfulness classes either as part of the PE curriculum or as an optional lunch time or afterschool activity.

4.

Appoint a good physical education and yoga teacher in school.

Q.3 Why gardening with kids in school helps learning?

Question ID : 16794318140

Ans  1.



# Coaching Available for All Types of Teaching Exams: CTET, KVS, DSSSB

Students can grow fresh fruits and vegetables in schools.

2. It addresses multiple learning styles.

3.

It makes school look beautiful so that children are happy.

4.

Teachers can have some relaxing time with kids.

Q.4 Developing national parks and wildlife sanctuaries in relatively undisturbed areas is an outcome of which of these values?

Question ID : 16794318129

Ans  1. Social values

2. Aesthetic values

3. Civic values

4. Cultural values

Q.5 What is the meaning of the Latin verb "Adolescere"?

Question ID : 16794318145

Ans  1. Cognitive development in teenagers

2. Affective development in teenagers

3. Growing up in the right way

4. To grow to become mature

Q.6 'Gestures' in microteaching are categorised under which of the following?

Question ID : 16794318132

Ans  1. Skill of reinforcement

2. Skill of stimulus variation

3. Skill of motivation

4. Skill of questioning

Q.7 In arts-infused classrooms, students can be more productively active, physically as well as mentally, because:

Question ID : 16794318137

Ans  1. The art teachers are usually more active

2. The arts offer additional learning modes

3. The art classes utilise colourful resources

4. The art classes are effective outdoors

Q.8 Evaluation is the highest stage of the knowledge under which domain?

Question ID : 16794318136

Ans  1. Cognitive domain

2. Skill domain

3. Psycho motor domain

4. Affective domain

Q.9 Why is sex education not discussed enough in our country?

Question ID : 16794318144

Ans  1.

Discussing sex education in our country is a taboo, not acceptable in our society

2.

Individuals above 18



# Coaching Available for All Types of Teaching Exams: CTET, KVS, DSSSB

3. Sex education should not be discussed in teenage years

4. College is the correct platform for including sex education in our country

Q.10 Refuse, reduce, reuse and recycle is the main theme of:

Question ID : 16794318131

- Ans
- 1. Environmental balance
  - 2. Ecological education
  - 3. Ecological balance
  - 4. Environmental education

Q.11 "A project is a bit of real life that has been imported into the school." This was stated by:

Question ID : 16794318134

- Ans
- 1. J.A. Stevenson
  - 2. Ballard
  - 3. Kilpartic
  - 4. John Dewy

Q.12 A model or a three-dimensional representation of the surface of the Earth is called as:

Question ID : 16794318135

- Ans
- 1. Charts
  - 2. Atlas
  - 3. Map
  - 4. Globe

Q.13 Being a teacher, why do you think physical education is as important as school work?

Question ID : 16794318141

Ans  1. School life is hectic for every individual

2. A physically active individual is more likely to be happy and healthy, which makes them a better student in the classroom

3. In today's world, many school children eat unhealthy food items

4. Students like to play and are always energetic during play

Q.14 The concept of core elements in social studies curriculum is given by:

Question ID : 16794318133

- Ans
- 1. NPE-1986
  - 2. NCF 2005
  - 3. NCERT
  - 4. SCF-2011

Q.15 Cartoons are described as humorous drawings. Why do you think these arts are helpful for children?

Question ID : 16794318139

- Ans
- 1. Cartoons are the most popular entertainment for children
  - 2. Cartoons draw children's attention and create comfortable learning environment
  - 3. Children love watching cartoons

4. Cartoons are mostly based on fairy tales

Q.16 What is the meaning of adolescent in sociological interpretation?

Question ID : 16794318146

Ans  1.

It represents a young person in transition between the behaviours that are typical of children and the behaviours that are typical of adults.

2.

It is a period of identity formation. At this stage, the individual begins to place himself/herself in egospace time.

3.

It is a period in which the individual becomes free from adult constraints.

4.

It is a transitional period between childhood and adulthood when a child moves from dependency upon parents or other adults of the family.

Q.17 Anecdotal records are maintained in schools. How can a teacher use this evaluation tool for the benefit of students?

Question ID : 16794318127

Ans  1.

To assess a student's interest and provide guidance

2.

To illustrate to the parents during the parent-teacher meet

3.

To provide appropriate grades in the achievement profile

4.

To make the student aware of his/her weakness

Q.18 "To remove the weakness of present day mathematics education, the mathematics laboratory can be the best place. "Do you feel the above statement is correct? If you feel it is correct, then state why.

Question ID : 16794318128

Ans  1.

The lab setup can provide scope for greater involvement of both mind and the hand, which facilitates cognition

2.

Every school is trying to establish a maths laboratory in the school.

3.

Students are passive learners and they enjoy learning in the mathematics laboratory.

4.

Mathematics is a very difficult subject to teach on a regular class.

Q.19 Drama is a valuable tool for use in a class room. It caters to:

Question ID : 16794318138

Ans  1.

Students who like to move and interact with others

2. Students who are very active and expressive

3.

Students who are challenged by reading and writing

4. Students who can memorise and speak well

Q.20 What did UNICEF and NCERT include in sex education?

Question ID : 16794318143

Ans  1. Social etiquettes

2. Taking care of feelings and emotions

3. Cognitive development

4.

Section : Subject Related

Q.1 "Our education has got to be revolutionized. The brain must be educated through the hand." This was said by which famous person?

Question ID : 16794318156

- Ans
- 1. Dr. Khothari
  - 2. Ishwar bhai Patel
  - 3. Mahatma Gandhi
  - 4. Jawaharlal Nehru

Q.2 What is the main aim of Shiksha Karmi Project of Rajasthan- "Filling the Vacuum"?

Question ID : 16794318158

- Ans
- 1. To tackle the problem of teacher absenteeism
  - 2. To tackle the problem of lack of teachers
  - 3. To tackle the problem of inexperience of teachers
  - 4. To tackle the problem of disinterest among teachers

Q.3 What does physical development mean in case of adolescents?

Question ID : 16794318147

- Ans
- 1. Maturation process in which an individual's cognitive development happens and individual becomes socially active
  - 2. Maturation process that leads to various physical changes: growth is accelerated; bodily shape changes; primary and secondary sexual characteristics become marked
  - 3. Maturational process where emotional changes happen
  - 4. Maturation process in which the individual grows tall and strong

Q.4 Which of the following is an appropriate choice for experiential learning of work education?

Question ID : 16794318155

- Ans
- 1. Class rooms
  - 2. Public places such as post offices, banks etc.
  - 3. Outside of the classroom but within the school premises
  - 4. Other schools

Q.5 "Education is manifestation of perfection already in man." Who said this?

Question ID : 16794318149

- Ans
- 1. Mahatma Gandhi
  - 2. Cassidy
  - 3. JP Thomas
  - 4. Swami Vivekananda

Q.6



NCERT is meant for:

Question ID : 16794318166

- Ans
- 1. Research in economic field
  - 2. Research in Ecology
  - 3. Researches in environmental issues
  - 4. Research in education

Q.7 Warming up activities in a physical education class is important because they:

Question ID : 16794318154

- Ans
- 1. Help to set the rhythm for the formal activities
  - 2. Allow relaxation time for teachers
  - 3. Create opportunities to win
  - 4. Are interesting to the students

Q.8 Which of the following is not a component of physical fitness?

Question ID : 16794318151

- Ans
- 1. Flexibility
  - 2. Speed
  - 3. Endurance
  - 4. Logic

Q.9 What is the role of leading teachers?

Question ID : 16794318164

- Ans
- 1. Improvement of management and supervision
  - 2. Improvement of school
  - 3. Improvement of technology
  - 4. Improvement of skills, knowledge and performance

Q.10 How does cognitive development happen in adolescents?

Question ID : 16794318148

- Ans
- 1. The cognitive development takes place mainly in areas of perception, handling of logical problem & reasoning
  - 2. The cognitive development has already taken place
  - 3. The cognitive development takes place in getting knowledge about the world
  - 4. No further cognitive development takes place

Q.11 Which of the following is not a member of the SMC?

Question ID : 16794318163

- Ans
- 1. Literate parents
  - 2. Literate community members
  - 3. Students



**X** 4. Teachers

Q.12 The Olympic Motto "Citius Altius Fortius" means:

Question ID : 16794318152

- Ans
- X** 1. Fitter, Speeder, Stronger
  - ✓** 2. Faster, Higher, Stronger
  - X** 3. Faster, Fitter, Flexible
  - X** 4. Fitter, Stronger, Taller

Q.13 Which is the correct expanded form of VES?

Question ID : 16794318159

- Ans
- X** 1. Village Experience Committee
  - X** 2. Village Excursion Committee
  - ✓** 3. Village Education Committee
  - X** 4. Village Enhance Committee

Q.14 One of the important aims of physical education is to develop:

Question ID : 16794318150

- Ans
- ✓** 1. Emotional adjustment
  - X** 2. Employability skills
  - X** 3. Spirituality
  - X** 4. Obedience

Q.15 The president of VEC is:

Question ID : 16794318160

- Ans
- X** 1. Teacher
  - X** 2. Parent
  - X** 3. Head master
  - ✓** 4. Gram Sarpanch

Q.16 Horizontal upgrading and vertical upgrading are related with which of the following groups?

Question ID : 16794318165

- Ans
- X** 1. Pre-service teachers
  - X** 2. In-service principals
  - ✓** 3. In-service teachers
  - X** 4. Trained principals

Q.17 The concept of "work-experience" is first stated by which commission?

Question ID : 16794318157

- Ans
- X** 1. Mudaliar Commission: 1953-54
  - X** 2. Radha Krishnan Commission: 1948
  - X** 3. Ishwar bhai Patel Commission
  - ✓** 4. Kothri Education Commission: 1964-66

Q.18 Schools must take frequent help from which of the following groups for the academic progress of students?

Question ID : 16794318162

- Ans
- ✓** 1. Parents

- 2. Students
- 3. Commercial groups
- 4. Society

Q.19 World Declaration on Education For All' was done in which of the following conferences?

Question ID : 16794318161

- Ans
- 1. Jaipur
  - 2. Jomtien
  - 3. Jamaica
  - 4. Jordan

Q.20 Special Olympics are organised for which section of the population?

Question ID : 16794318153

- Ans
- 1. Emotionally disturbed
  - 2. Physically challenged
  - 3. Socially excluded
  - 4. Mentally retarded and with cognitive delays



# Latest Sarkari jobs, Govt Exam alerts, Results and Vacancies

- ▶ Latest News and Notification
- ▶ Exam Paper Analysis
- ▶ Topic-wise weightage
- ▶ Previous Year Papers with Answer Key
- ▶ Preparation Strategy & Subject-wise Books

To know more [Click Here](#)



[www.prepp.in](http://www.prepp.in)