

**SSC
GD**

**Previous Year Paper
25 Nov 2021 Shift 2**

Exam Date	25/11/2021
Exam Time :	12:30 PM - 2:00 PM
Subject	Constable GD 2021

Section : Part A General Intelligence and Reasoning

Q.1 Select the number from among the given options that can replace the question mark (?) in the following series.

34, 37, 42, 49, 60, 73, 90, ?

- Ans 1. 109
 2. 119
 3. 117
 4. 99

Question ID : 65497828214
Status : Answered
Chosen Option : 1

Q.2 'Suva' is related to 'Fiji' in the same way as 'Helsinki' is related to '_____'.

- Ans 1. Greece
 2. France
 3. Finland
 4. Hungary

Question ID : 65497828234
Status : Not Answered
Chosen Option : --

Q.3 Select the correct mirror image of the given combination when the mirror is placed at the right side.

B Y u m g d

- Ans 1. **B Y u m g d**
 2. **B Y u m g d**
 3. **B Y u m g d**
 4. **B Y u m g d**

Question ID : 65497828215
Status : Answered
Chosen Option : 4

Q.4 Six friends A, B, C, D, E and F are sitting in a straight horizontal line facing the north. Four persons are sitting between E and C. D is sitting between A and F. A is to the immediate right of E. Who is sitting to the immediate right of F?

- Ans
- 1. C
 - 2. D
 - 3. B
 - 4. A

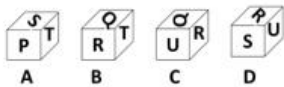
Question ID : 65497828235
 Status : Answered
 Chosen Option : 3

Q.5 N has two children S and P. N's wife J is the only sister of M's mother. R is M's maternal grandfather. How is R related to N?

- Ans
- 1. Son-in-law
 - 2. Father
 - 3. Father-in-law
 - 4. Uncle

Question ID : 65497828232
 Status : Answered
 Chosen Option : 3

Q.6 Select the dice that can be formed by folding the given sheet along the lines.



- Ans
- 1. Only A, B and C
 - 2. Only B and D
 - 3. Only A and B
 - 4. A, B, C and D

Question ID : 65497828228
 Status : Answered
 Chosen Option : 4

Q.7 The sum of the present ages of a father and his son is 58 years. Four years ago, the ratio of their ages was 4 : 1. What is the present age of the father?

- Ans
- 1. 35 years
 - 2. 44 years
 - 3. 38 years
 - 4. 40 years

Question ID : 65497828219
 Status : Answered
 Chosen Option : 2

Q.8 Select the combination of letters that when sequentially placed in the blanks of the given series will complete the series.

r _ x l _ q _ _ x _ p q _ e _ l p _

- Ans 1. e, p, r, e, l, r, x, q
 2. p, e, r, p, l, r, x, q
 3. e, x, q, r, p, l, x, p
 4. p, e, q, l, x, p, r, q

Question ID : 65497828222
Status : Answered
Chosen Option : 1

Q.9 उस विकल्प का चयन करें, जिसका तीसरे पद से वही सबध है, जो दूसरे पद का पहले पद से है।

LARGE : MASHE :: WATER : _____

- Ans 1. VAUES
 2. VBSFQ
 3. XAUES
 4. XBUFS

Question ID : 65497828230
Status : Answered
Chosen Option : 3

Q.10 Select the number from among the given options that can replace the question mark (?) in the following series.

14, 29, 57, 115, 229, ?

- Ans 1. 457
 2. 463
 3. 461
 4. 459

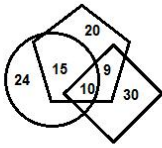
Question ID : 65497828223
Status : Answered
Chosen Option : 4

Q.11 Four letter-clusters have been given, out of which three are alike in some manner and one is different. Select the letter-cluster that is different.

- Ans 1. TXBFK
 2. YDINS
 3. BGLQV
 4. PUZEJ

Question ID : 65497828212
Status : Answered
Chosen Option : 1

Q.12 In the following diagram, the 'rhombus' stands for 'teachers', the 'circle' stands for 'social servants', and the 'pentagon' stands for 'females'. The numbers given in the different segments represent the number of persons of that category.



How many female teachers are also social servants?

- Ans**
- 1. 24
 - 2. 10
 - 3. 9
 - 4. 15

Question ID : 65497828236
 Status : Answered
 Chosen Option : 2

Q.13 Select the figure from among the given options that can replace the question mark (?) in the following series.



Ans

- 1.
- 2.
- 3.
- 4.

Question ID : 65497828224
 Status : Answered
 Chosen Option : 3

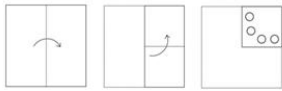
Q.14 Select the letter-cluster from among the given options that can replace the question mark (?) in the following series.

GQT, ETP, CWL, AZH, ?

- Ans**
- 1. YBD
 - 2. YCD
 - 3. ZCD
 - 4. YCE


Question ID : 65497828233
 Status : Answered
 Chosen Option : 2

Q.15 The sequence of folding a piece of paper and the manner in which the folded paper has been cut is shown in the following figures. How would this paper look when unfolded?

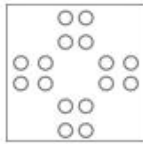


Ans

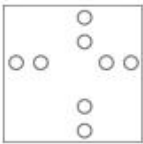
1.



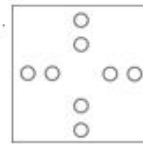
2.



3.



4.



Question ID : 65497828220

Status : Answered

Chosen Option : 2

Q.16 Select the number-triad in which the three numbers share a different relationship from that shared by the three numbers in the rest of the number-triads.

Ans 1. (13, 39, 65)

2. (19, 57, 95)

3. (23, 69, 105)

4. (17, 51, 85)

Question ID : 65497828218

Status : Answered

Chosen Option : 3

Q.17 Select the option that is related to the third number in the same way as the second number is related to the first number.

7 : 342 :: 9 : ?

Ans 1. 329

2. 728

3. 327

4. 729

Question ID : 65497828226

Status : Answered

Chosen Option : 2

Q.18 In a certain code language, 'FRY' is coded as '147' and 'CROP' is coded as '208'. How will 'MUSIC' be coded in that language?

- Ans
- 1. 295
 - 2. 385
 - 3. 199
 - 4. 325

Question ID : 65497828213
Status : Answered
Chosen Option : 4

Q.19 In a certain code language, 'SHIMLA' is written as 'TJLQQG' and 'RANCHI' is written as 'SCQGM0'. How will 'MUMBAI' be written in that language?

- Ans
- 1. OWQEEP
 - 2. NWPFFO
 - 3. NXQEFP
 - 4. MXPEFP

Question ID : 65497828216
Status : Answered
Chosen Option : 2

Q.20 In a certain code language, CHEAP is written as QBFIG. How will QUOTE be written in that language?

- Ans
- 1. RVNUF
 - 2. ETOUQ
 - 3. UOQET
 - 4. FUPVR

Question ID : 65497828231
Status : Answered
Chosen Option : 4

Q.21 उस सही विकल्प का चयन करें, जो दिए गए शब्दों के तार्किक और सार्थक क्रम को दर्शाता है।

- i. फूल
- ii. अकुर
- iii. फल
- iv. पौधा
- v. बीज

- Ans
- 1. ii, v, iv, i, iii
 - 2. v, ii, iv, i, iii
 - 3. ii, i, iii, iv, v
 - 4. v, iv, i, iii, ii

Question ID : 65497828221
Status : Answered
Chosen Option : 2

Q.22 Select the option that is embedded in the given figure (rotation is NOT allowed).



Ans

- 1.
- 2.
- 3.
- 4.

Question ID : 65497828229

Status : Answered

Chosen Option : 2

Q.23 Eight friends, Arvind, Priya, Kunal, Kajal, Ashish, Mahak, Shubham and Riddhi are sitting around an octagonal table, facing the centre. Kunal is between Mahak and Ashish. Kajal is between Priya and Arvind. Shubham is to the immediate left of Riddhi. Arvind is third to the right of Ashish. Who is sitting between Riddhi and Priya?

- Ans
- 1. Ashish
 - 2. Arvind
 - 3. Kajal
 - 4. Shubham

Question ID : 65497828225

Status : Answered

Chosen Option : 4

Q.24 Read the given statements and conclusions carefully. Assuming that the information given in the statements is true, even if it appears to be at variance with commonly known facts, decide which of the given conclusions logically follow(s) from the statements.

Statements:
All leaders are males.
Some students are leaders.

Conclusions:
I. Some students are males.
II. All leaders are students.

- Ans
- 1. Only conclusion I follows
 - 2. Both conclusions I and II follow
 - 3. Only conclusion II follows
 - 4. Either conclusion I or II follows

Question ID : 65497828217

Status : Answered

Chosen Option : 1

Q.25 If '+' means '-', '-' means 'x', 'x' means '+', and '+' means '+', then what will be the value of the following expression?

$$9 - 9 \div 72 \times 4 + 6$$

- Ans
- 1. 27
 - 2. 29
 - 3. 98
 - 4. 93

Question ID : 65497828227
Status : Answered
Chosen Option : 4

Section : Part B General Knowledge and General Awareness

Q.1 Inertia can be measured by its _____.

- Ans
- 1. force
 - 2. state of motion
 - 3. mass
 - 4. acceleration

Question ID : 65497828252
Status : Answered
Chosen Option : 4

Q.2 Which ministry/institution has released the Provisional Estimates of National Income for the financial year 2019-20, both – at Constant Prices (2011-12) and Current Prices?

- Ans
- 1. National Statistical Office
 - 2. NITI Aayog
 - 3. Ministry of Home Affairs
 - 4. Finance Commission

Question ID : 65497828245
Status : Answered
Chosen Option : 1

Q.3 The _____ dam is built across the Subarnarekha river.

- Ans
- 1. Bhairwa
 - 2. Malay
 - 3. Barhi
 - 4. Chandil

Question ID : 65497828260
Status : Answered
Chosen Option : 4

Q.4 Which among the following is NOT a participant at the 2020-21 Hero Indian Super League?

- Ans
- 1. Odisha FC
 - 2. Kochi FC
 - 3. Jamshedpur FC
 - 4. Bengaluru FC

Question ID : 65497828244
Status : Answered
Chosen Option : 3

Q.5 भारतीय दंड संहिता की धारा 354 _____ से संबन्धित है।

- Ans
- 1. स्वेच्छा से गभीर चोट पहुंचाने के लिए दंड
 - 2. अपहरण करने के लिए दंड
 - 3. किसी व्यक्ति को गभीर आघात या मृत्यु का भय दिखाकर रगदारी वसूलने
 - 4. किसी स्त्री की लज्जा भंग करने के उद्देश्य से उस महिला पर हमला करने या उस पर आपराधिक बल का प्रयोग करने

Question ID : 65497828258
Status : Answered
Chosen Option : 1

Q.6 What was the maiden name of Begum Nur Jahan?

- Ans
- 1. Padmavati
 - 2. Indira Kanwar
 - 3. Mehr-un-Nissa
 - 4. Harkha Bai

Question ID : 65497828254
Status : Answered
Chosen Option : 3

Q.7 जुलाई 2021 में, _____ को 2019 के लिए इंडियन स्पोर्ट्स ऑनर में डिफरेंटली एबल्ड स्पोर्ट्समैन ऑफ द इयर (Differently Abled Sportsman of the Year) के रूप में नामित किया गया था।

- Ans
- 1. प्रमोद भगत
 - 2. धर्मबीर नैन
 - 3. विवेक चिकारा
 - 4. अमित कुमार सरोहा

Question ID : 65497828261
Status : Answered
Chosen Option : 4

Q.8 Who was the winner of 'The Hindu Prize 2019' in the category of Fiction?

- Ans
- 1. Neelum Saran Gour
 - 2. Anuradha Roy
 - 3. Mirza Waheed
 - 4. Amitabha Bagchi

Question ID : 65497828253
Status : Answered
Chosen Option : 1

Q.9 भारतीय रिजर्व बैंक अधिनियम, 1934 की धारा _____ के अनुसार, बैंक को सभी मूल्यवर्गों के बैंक नोट जारी करने का पूर्ण अधिकार प्राप्त है।

- Ans
- 1. 25
 - 2. 22
 - 3. 20
 - 4. 32

Question ID : 65497828242
Status : Not Answered
Chosen Option : --

Q.10 Who among the following is the author of the book 'Maun Muskaan Ki Maar'?

- Ans 1. Ashutosh Rana
 2. Jugal Hansraj
 3. Uday Chopra
 4. Ronit Roy

Question ID : 65497828239
Status : Answered
Chosen Option : 2

Q.11 Who among the following is a shot put player from India?

- Ans 1. Vikash Thakur
 2. Tajinderpal Singh Toor
 3. Deepak Lather
 4. Jeremy Lalrinnunga

Question ID : 65497828240
Status : Answered
Chosen Option : 2

Q.12 World Philosophy Day is celebrated each year on the third _____ of November.

- Ans 1. Thursday
 2. Saturday
 3. Friday
 4. Monday

Question ID : 65497828248
Status : Not Answered
Chosen Option : --

Q.13 भारत के कितने राज्यों में द्विसदनीय विधानमंडल है?

- Ans 1. दो
 2. सात
 3. चार
 4. छह

Question ID : 65497828256
Status : Not Answered
Chosen Option : --

Q.14 The Government of India revised the National List of Essential Medicines (NLEM) in September 2021 by adding _____ drugs and deleting some.

- Ans 1. 27
 2. 42
 3. 16
 4. 39

Question ID : 65497828259
Status : Answered
Chosen Option : 2

Q.15 Who was the viceroy of India when Arya Samaj was founded by Swami Dayananda Saraswati?

- Ans 1. Lord Northbrook
 2. Lord Curzon
 3. Lord Lansdowne
 4. Lord Dalhousie

Question ID : 65497828247
Status : Answered
Chosen Option : 2

Q.16 कृषि की उस शाखा को क्या कहा जाता है, जो बागानी फसलो (garden crops) – सामान्यतः फल, सब्जियों और सजावटी पौधो से सबधित है?

- Ans 1. बागबानी (Horticulture)
 2. रेशम कीट-पालन (Sericulture)
 3. पर्माकल्चर (Permaculture)
 4. पुष्पकृषि (Floriculture)

Question ID : 65497828238
Status : Answered
Chosen Option : 1

Q.17 _____, आर्थिक स्थितियों को प्रभावित करने के लिए सरकारी व्यय और कर नीतियों का उपयोग है।

- Ans 1. सविदात्मक मौद्रिक नीति
 2. विस्तारकारी नीति
 3. मौद्रिक नीति
 4. राजकोषीय नीति

Question ID : 65497828249
Status : Answered
Chosen Option : 4

Q.18 निम्न में से कौन-सी कला शैली पुरुषो द्वारा प्रदर्शित की जाती है, जिसमें उनका शरीर 'रामरस' से सना रहता है और वे साधारणतया पीले रंग के परिधान पहनकर गाते हुए 'करताल' के साथ नृत्य करते हैं?

- Ans 1. झूला (Jhoola)
 2. खेलिड़ा (Kheliran)
 3. झूमर (Jhumar)
 4. चैती (Chaiti)

Question ID : 65497828250
Status : Answered
Chosen Option : 4

Q.19 ओडिशा राज्य का 'धेनका (Dhenka)' एक लोकप्रिय _____ वाद्ययंत्र है।

- Ans 1. इडियोफोन (idiophone)
 2. कोर्डोफोन (chordophone)
 3. एरोफोन (aerophone)
 4. मेम्ब्रेनोफोन (membranophone)

Question ID : 65497828237
Status : Not Answered
Chosen Option : --

Q.20 Which of the following statements is NOT true regarding brain fingerprinting?

- Ans 1. Brain fingerprinting is also known as Brain Electrical Oscillation Signature Profiling (BEOSP).
2. The test involves a question answer session with the accused.
3. The test is carried out by electroencephalogram, to study the electrical behaviour of the human brain.
4. Information or material discovered during the tests can be made part of the evidence.

Question ID : 65497828257
Status : Answered
Chosen Option : 3

Q.21 Narayana Guru, one of the great social reformers of the 19th century, was born in the state of _____.

- Ans 1. Karnataka
2. West Bengal
3. Assam
4. Kerala

Question ID : 65497828243
Status : Answered
Chosen Option : 2

Q.22 पौधो और पशुओ में जैविक घटनाओ, जैसे - फूल आना, पत्तिया निकलना, सुषुप्तावस्था, प्रजनन और प्रवासन आदि के समय का अध्ययन क्या कहलाता है?

- Ans 1. पोमोलॉजी (pomology)
2. लाइकेनोलॉजी (lichenology)
3. सिनेन्थेरोलॉजी (synantherology)
4. फीनोलॉजी (phenology)

Question ID : 65497828246
Status : Answered
Chosen Option : 1

Q.23 As of March 2021, which Indian state stands first in Jute production?

- Ans 1. West Bengal
2. Assam
3. Jharkhand
4. Tripura

Question ID : 65497828241
Status : Answered
Chosen Option : 1

Q.24 Which of the following is India's first indigenously developed vaccine developed by Serum Institute of India in collaboration with the Bill and Melinda Gates Foundation and PATH?

- Ans 1. Varicella
2. Cholera
3. Pneumosil
4. Anthrax

Question ID : 65497828251
Status : Answered
Chosen Option : 4

Q.25 Which of the following Indian slums is one of the world's largest slums?

- Ans
- 1. Bhalswa
 - 2. Basanti
 - 3. Dharavi
 - 4. Nochikuppam

Question ID : 65497828255
Status : Answered
Chosen Option : 3

Section : Part C Elementary Mathematics

Q.1 The LCM of $\frac{3}{7}$ and $\frac{18}{5}$ is:

- Ans
- 1. 7
 - 2. 18
 - 3. 10
 - 4. 6

Question ID : 65497828274
Status : Answered
Chosen Option : 2

Q.2 A's monthly salary is 20% more than B's monthly salary. C's monthly salary is ₹25,000 more than B's monthly salary. Their total monthly salary is ₹2,65,000. The salary of C is what percentage more than that of A's salary?

- Ans
- 1. $13\frac{1}{9}\%$
 - 2. $19\frac{1}{5}\%$
 - 3. $11\frac{1}{9}\%$
 - 4. $5\frac{1}{5}\%$

Question ID : 65497828264
Status : Answered
Chosen Option : 3

Q.3 If 782 is divided in the ratio of $\frac{1}{2} : \frac{2}{3} : \frac{3}{4}$, then the first part will be:

- Ans
- 1. 204
 - 2. 144
 - 3. 156
 - 4. 324

Question ID : 65497828276
Status : Answered
Chosen Option : 1

Q.4 A shopkeeper purchased some material for ₹800, of which 40% was sold at a loss of 10%. To obtain a gain of 12%, the percentage profit on the remaining goods must be:

- Ans**
- 1. $26\frac{1}{3}\%$
 - 2. 12%
 - 3. $26\frac{2}{3}\%$
 - 4. $26\frac{3}{5}\%$

Question ID : 65497828279
Status : Answered
Chosen Option : 3

Q.5 For doing a certain work, the efficiencies of A, B and C are in the ratio 2 : 3 : 5. Working together, they can complete the same work in 15 days. B and C can complete 80% of the original work in:

- Ans**
- 1. 15 days
 - 2. 18 days
 - 3. 20 days
 - 4. 12 days

Question ID : 65497828285
Status : Answered
Chosen Option : 1

Q.6 The sum of the radius of the base and height of a solid cylinder is 17 cm. If the total surface area of the solid cylinder is 748 cm^2 , then the height of the cylinder is:

- Ans**
- 1. 12 cm
 - 2. 15 cm
 - 3. 14 cm
 - 4. 10 cm

Question ID : 65497828268
Status : Answered
Chosen Option : 4

Q.7 A train X of length 345 m running at 50 km/h crosses another train Y running at 76 km/h in the opposite direction in 22 seconds. Train Y will cross a bridge of length 905 m in:

- Ans**
- 1. 54 seconds
 - 2. 56 seconds
 - 3. 52 seconds
 - 4. 63 seconds

Question ID : 65497828286
Status : Answered
Chosen Option : 4

Q.8 On what sum will the simple interest at a rate of $x\%$ p.a. in x years will be ₹ x ?

- Ans
- 1. ₹ $x/100$
 - 2. ₹ $100x$
 - 3. ₹ $100/x$
 - 4. ₹ x

Question ID : 65497828277
Status : Answered
Chosen Option : 3

Q.9 The profit earned after selling an article for ₹5,800 is the same as the loss incurred after selling the article for ₹2,200.
The profit (in ₹) is:

- Ans
- 1. 2,100
 - 2. 1,500
 - 3. 1,200
 - 4. 1,800

Question ID : 65497828265
Status : Answered
Chosen Option : 4

Q.10 The income of A is 80% more than that of B, and the income of C is 25% more than 20% of the combined incomes of A and B. By what percentage is the income of C less than the income of A? (Correct to one decimal place)

- Ans
- 1. 61.1%
 - 2. 82.8%
 - 3. 62.6%
 - 4. 157.1%

Question ID : 65497828284
Status : Answered
Chosen Option : 4

Q.11 $6 \times (4 \times 5^2) \div 3 + 7 - 8 = ?$

- Ans
- 1. 199
 - 2. 299
 - 3. 189
 - 4. 200

Question ID : 65497828269
Status : Answered
Chosen Option : 1

Q.12 A shopkeeper sells a fan for ₹912 at a gain of 14% and another fan for ₹1,012 at a loss of 8%. What is his overall gain or loss percentage?

- Ans**
- ✓ 1. $1\frac{5}{19}\%$ gain
 - ✗ 2. $1\frac{4}{9}\%$ loss
 - ✗ 3. $1\frac{2}{5}\%$ loss
 - ✗ 4. $1\frac{3}{11}\%$ gain

Question ID : 65497828281
Status : Answered
Chosen Option : 1

Q.13 The unit's digit in $(263)^{149} + (263)^{150} + (263)^{151}$ is:

- Ans**
- ✗ 1. 1
 - ✓ 2. 9
 - ✗ 3. 3
 - ✗ 4. 7

Question ID : 65497828263
Status : Answered
Chosen Option : 2

Q.14 Three horses are tied at three vertices of a triangular field, each with a 7 m long rope. What is the total area grazed by the horses?

- Ans**
- ✗ 1. 58 m^2
 - ✗ 2. 46 m^2
 - ✗ 3. 70 m^2
 - ✓ 4. 77 m^2

Question ID : 65497828273
Status : Answered
Chosen Option : 4

Q.15 Three persons namely Govind, Rahim and Sudhir can complete a work in 8, 12 and 15 days, respectively. The time taken to complete the work when they work together is:

- Ans**
- ✓ 1. $40/11$ days
 - ✗ 2. 4 days
 - ✗ 3. $53/11$ days
 - ✗ 4. 6 days

Question ID : 65497828280
Status : Answered
Chosen Option : 1

Q.16 A sum lent at compound interest amounts to 72.8% more than itself in 3 years, interest compounded annually at a certain rate per cent per annum. What will be the compound interest (in ₹) on a sum of ₹18,000 for $1\frac{1}{2}$ years at the same rate, if the interest is compounded six-monthly?

- Ans**
- 1. 6,897
 - 2. 5,598
 - 3. 7,654
 - 4. 5,958

Question ID : 65497828266
Status : Answered
Chosen Option : 4

Q.17 What price should a shopkeeper mark on an article, costing him ₹210, to gain 16% after allowing a discount of 16%?

- Ans**
- 1. ₹290
 - 2. ₹210
 - 3. ₹270
 - 4. ₹250

Question ID : 65497828262
Status : Answered
Chosen Option : 1

Q.18 A car takes 4 hours to cover a distance if it travels at a speed of 60 km/h. What should be its speed (in km/h) to cover the same distance in 1.5 hours?

- Ans**
- 1. 150
 - 2. 165
 - 3. 180
 - 4. 160

Question ID : 65497828270
Status : Answered
Chosen Option : 4

Q.19 Two positive numbers A and B ($A > B$) are in the ratio 11 : 8. If the difference between 7 times of A and 4 times of B is 225, then the value of $2A + 3B$ is:

- Ans**
- 1. 330
 - 2. 220
 - 3. 230
 - 4. 320

Question ID : 65497828267
Status : Answered
Chosen Option : 3

Q.20 The average weight of some persons in a group is 70 kg. When 15 persons with average weight 60 kg leave the group or 15 persons with average weight 87.5 kg join the group, then the average weight of persons in the group in both the cases is equal. How many persons were there in the group, initially?

- Ans**
- 1. 35
 - 2. 45
 - 3. 55
 - 4. 65

Question ID : 65497828282
Status : Answered
Chosen Option : 3

Q.21 In how much time will a sum of money double itself at 12% p.a. simple interest?

- Ans**
- 1. 6 years 2 months
 - 2. 8 years 1 month
 - 3. 6 years 4 months
 - 4. 8 years 4 months

Question ID : 65497828272
Status : Answered
Chosen Option : 4

Q.22

$$\frac{0.2 \div \frac{1}{2} \text{ of } \frac{2}{3} - 1 \times 2 \div 2}{0.2 \times 2 \div \frac{1}{2} \text{ of } \frac{2}{3} - 2 \text{ of } \frac{1}{2} \div \frac{1}{4}}$$

On simplification, the given expression gives the result as:

- Ans**
- 1. $\frac{1}{7}$
 - 2. -1.3
 - 3. $-\frac{2}{19}$
 - 4. 1.3

Question ID : 65497828278
Status : Answered
Chosen Option : 1

Q.23 The average of the ages of a husband and his wife was 25 years at the time of their wedding. After 7 years, they have a 2-year old child. What is the average age of the family at present?

- Ans**
- 1. 21 years
 - 2. 22 years
 - 3. 29 years
 - 4. 25 years

Question ID : 65497828275
Status : Answered
Chosen Option : 2

Q.24 An article is sold for ₹452.20, after allowing three successive discounts of 20%, 30% and 5%. If a single discount of 55% is given on the marked price, then its selling price (in ₹) will be:

- Ans
- 1. 425.25
 - 2. 382.50
 - 3. 384.75
 - 4. 467.50

Question ID : 65497828283
Status : Answered
Chosen Option : 2

Q.25 Divide 2310 people in three parties such that half in the first party, one-third in the second party and one-sixth in the third party are all equal.

- Ans
- 1. 420, 650, 1240
 - 2. 420, 600, 1290
 - 3. 420, 630, 1260
 - 4. 420, 620, 1270

Question ID : 65497828271
Status : Answered
Chosen Option : 3

Section : Part D English

Q.1 The following sentence has been split into four segments. Identify the segment that contains a grammatical error.

Each of the students were / present for / the valedictory session / that night.

- Ans
- 1. present for
 - 2. that night
 - 3. Each of the students were
 - 4. the valedictory session

Question ID : 65497828302
Status : Not Answered
Chosen Option : --

Q.2 Select the option that can be used as a one-word substitute for the given group of words.

A person who helps willingly without being paid for it

- Ans
- 1. Volunteer
 - 2. Beggar
 - 3. Worker
 - 4. Leader

Question ID : 65497828296
Status : Not Answered
Chosen Option : --

Q.3 Select the most appropriate meaning of the given idiom.

To take pains

- Ans
- 1. To be involved in
 - 2. To wait anxiously
 - 3. To get injured
 - 4. To make efforts

Question ID : 65497828288

Status : Not Answered

Chosen Option : --

Q.4 Select the most appropriate option that can substitute the underlined segment in the given sentence. If there is no need to substitute it, select 'No substitution required'.

Neither the chairman nor the directors has present.

- Ans
- 1. had present
 - 2. are present
 - 3. No substitution required
 - 4. is present

Question ID : 65497828300

Status : Not Answered

Chosen Option : --

Q.5 Select the most appropriate meaning of the given idiom.

Child's play

- Ans
- 1. Something that is very easy
 - 2. Fair behaviour
 - 3. Mischievous behaviour
 - 4. Playful attitude

Question ID : 65497828291

Status : Not Answered

Chosen Option : --

Q.6 Select the option that can be used as a one-word substitute for the given group of words.

Go back over the same route that one has just taken

- Ans
- 1. Retrace
 - 2. Detour
 - 3. Return
 - 4. Reroute

Question ID : 65497828304

Status : Not Answered

Chosen Option : --

Q.7 Select the most appropriate synonym of the given word.

Estimate

- Ans 1. Believe
 2. Solve
 3. Assess
 4. Discover

Question ID : 65497828290
Status : Not Answered
Chosen Option : --

Q.8 The following sentence has been split into four segments. Identify the segment that contains a grammatical error.

They would have / won the race / if they would have / run faster.

- Ans 1. won the race
 2. if they would have
 3. run faster
 4. They would have

Question ID : 65497828294
Status : Not Answered
Chosen Option : --

Q.9 Select the most appropriate synonym of the given word.

Perceive

- Ans 1. Recognise
 2. Declare
 3. Present
 4. Discuss

Question ID : 65497828303
Status : Not Answered
Chosen Option : --

Q.10 Select the INCORRECTLY spelt word.

- Ans 1. Aqurarium
 2. Honorarium
 3. Boutique
 4. Bungalow

Question ID : 65497828298
Status : Not Answered
Chosen Option : --

Q.11 The following sentence has been divided into parts. One of them may contain an error. Select the part that contains the error from the given options. If you don't find any error, select 'No error' as your answer.

The book must be / old for its cover / is torn bad.

- Ans 1. No error
 2. old for its cover
 3. The book must be
 4. is torn bad

Question ID : 65497828289
Status : Not Answered
Chosen Option : --

Q.12 Select the most appropriate ANTONYM of the given word.

Deceive

- Ans 1. Delude
 2. Pretend
 3. Betray
 4. Support

Question ID : 65497828305
Status : Not Answered
Chosen Option : --

Q.13 Select the most appropriate ANTONYM of the given word.

Opaque

- Ans 1. Dense
 2. Clear
 3. Misty
 4. Hazy

Question ID : 65497828295
Status : Not Answered
Chosen Option : --

Q.14 Select the most appropriate option to fill in the blank.

He is greatly loved by all for his _____ nature.

- Ans 1. confused
 2. bewildered
 3. decorative
 4. compassionate

Question ID : 65497828299
Status : Not Answered
Chosen Option : --

Q.15 Select the most appropriate option that can substitute the underlined segment in the given sentence. If there is no need to substitute it, select 'No substitution required'.

Srinu had to take a break from his training for the marathon during the lockdown so he decided to go to his hometown.

- Ans
- 1. take a break on
 - 2. took a break in
 - 3. take break for
 - 4. No substitution required

Question ID : 65497828292
Status : Not Answered
Chosen Option : --

Q.16 Select the INCORRECTLY spelt word.

- Ans
- 1. Negotiate
 - 2. Miraculous
 - 3. Reffere
 - 4. Satellite

Question ID : 65497828297
Status : Not Answered
Chosen Option : --

Q.17 Select the most appropriate option to fill in the blank.

People of the same _____ are not allowed to get married in her country.

- Ans
- 1. clan
 - 2. clam
 - 3. clot
 - 4. clum

Question ID : 65497828301
Status : Not Answered
Chosen Option : --

Q.18 Select the most appropriate option to fill in the blank.

After a hectic day, all he wanted was to rest in _____.

- Ans
- 1. calm
 - 2. quiet
 - 3. silence
 - 4. turmoil

Question ID : 65497828287
Status : Not Answered
Chosen Option : --

Q.19 Select the option that can be used as a one-word substitute for the given group of words.

A short interesting or amusing story

- Ans 1. Legend
 2. Myth
 3. Epic
 4. Anecdote

Question ID : **65497828293**
Status : **Not Answered**
Chosen Option : --

Q.20 Select the option that will improve the underlined part of the given sentence. In case no improvement is needed, select 'No improvement required'.

The joint family system have undergone drastic changes.

- Ans 1. has undergone
 2. No improvement required
 3. have underwent
 4. are undergoing

Question ID : **65497828306**
Status : **Not Answered**
Chosen Option : --

Comprehension:

In the following passage, some words have been deleted. Read the passage carefully and select the most appropriate option to fill in each blank.

Dr. Jill Biden is an English professor in a college and she has four degrees, (1) _____ a doctorate. She is the wife of (2) _____ newly elected U.S. President, Joe Biden. As (3) _____ next first lady, the 69-year-old Jill Biden (4) _____ to keep her job and continue teaching (5) _____ is something that she did as the second lady when her husband was the Vice President.

SubQuestion No : 21

Q.21 Select the most appropriate option to fill in blank no. 1.

- Ans 1. include
 2. including
 3. included
 4. includes

Question ID : **65497828308**
Status : **Not Answered**
Chosen Option : --

Comprehension:

In the following passage, some words have been deleted. Read the passage carefully and select the most appropriate option to fill in each blank.

Dr. Jill Biden is an English professor in a college and she has four degrees, (1) _____ a doctorate. She is the wife of (2) _____ newly elected U.S. President, Joe Biden. As (3) _____ next first lady, the 69-year-old Jill Biden (4) _____ to keep her job and continue teaching (5) _____ is something that she did as the second lady when her husband was the Vice President.

SubQuestion No : 22

Q.22 Select the most appropriate option to fill in blank no. 2.

- Ans 1. a
 2. the
 3. an
 4. one

Question ID : 65497828309

Status : **Not Answered**

Chosen Option : --

Comprehension:

In the following passage, some words have been deleted. Read the passage carefully and select the most appropriate option to fill in each blank.

Dr. Jill Biden is an English professor in a college and she has four degrees, (1) _____ a doctorate. She is the wife of (2) _____ newly elected U.S. President, Joe Biden. As (3) _____ next first lady, the 69-year-old Jill Biden (4) _____ to keep her job and continue teaching (5) _____ is something that she did as the second lady when her husband was the Vice President.

SubQuestion No : 23

Q.23 Select the most appropriate option to fill in blank no. 3.

- Ans 1. America's
 2. Americas
 3. Americas's
 4. Americas'

Question ID : 65497828310

Status : **Not Answered**

Chosen Option : --

Comprehension:

In the following passage, some words have been deleted. Read the passage carefully and select the most appropriate option to fill in each blank.

Dr. Jill Biden is an English professor in a college and she has four degrees, (1) _____ a doctorate. She is the wife of (2) _____ newly elected U.S. President, Joe Biden. As (3) _____ next first lady, the 69-year-old Jill Biden (4) _____ to keep her job and continue teaching (5) _____ is something that she did as the second lady when her husband was the Vice President.

SubQuestion No : 24

Q.24 Select the most appropriate option to fill in blank no. 4.

- Ans 1. aims
 2. thinks
 3. plans
 4. plots

Question ID : 65497828311

Status : **Not Answered**

Chosen Option : --

Comprehension:

In the following passage, some words have been deleted. Read the passage carefully and select the most appropriate option to fill in each blank.

Dr. Jill Biden is an English professor in a college and she has four degrees, (1) _____ a doctorate. She is the wife of (2) _____ newly elected U.S. President, Joe Biden. As (3) _____ next first lady, the 69-year-old Jill Biden (4) _____ to keep her job and continue teaching (5) _____ is something that she did as the second lady when her husband was the Vice President.

SubQuestion No : 25

Q.25 Select the most appropriate option to fill in blank no. 5.

- Ans 1. which
 2. who
 3. what
 4. whom

Question ID : 65497828312
Status : Not Answered
Chosen Option : --

Section : Part D Hindi

Q.1 दिये गये वाक्य में रेखांकित अश को प्रतिस्थापित करने के लिए सबसे उपयुक्त विकल्प का चयन करें।

प्रतीक को हर तीसरे दिन दौरा आता है।

- Ans 1. गिरता है।
 2. होता है।
 3. पड़ता है।
 4. चलता है।

Question ID : 65497828331
Status : Answered
Chosen Option : 3

Q.2 दिए गए शब्द के समानार्थी शब्द का चयन करें।

चन्द्र

- Ans 1. तोय
 2. वरी
 3. निशा
 4. राकेश

Question ID : 65497828329
Status : Answered
Chosen Option : 4

Q.3 'लगोटी में फाग खेलना' इस मुहावरे का क्या अर्थ है?

- Ans 1. धनी का निर्धन हो जाना
 2. पुराने रीति-रिवाजों का अनुसरण करना
 3. दरिद्रता में आनंद लूटना
 4. भाग्य से बड़ा होना

Question ID : 65497828314
Status : Answered
Chosen Option : 3

Q.4 दिए गए शब्द का विलोम शब्द चुनें।

कीर्ति

- Ans 1. अकीर्ति
 2. सुकीर्ति
 3. कुकीर्ति
 4. अपकीर्ति

Question ID : 65497828320
Status : Answered
Chosen Option : 1

Q.5 दिए गए शब्द के समानार्थी शब्द का चयन करें।

ज्ञानी

- Ans 1. मनोज्ञ
 2. मनीषी
 3. मर्कट
 4. विप्र

Question ID : 65497828318
Status : Answered
Chosen Option : 4

Q.6 दिये गये वाक्य में रेखांकित अश को प्रतिस्थापित करने के लिए सबसे उपयुक्त विकल्प का चयन करें।

इस घटना की परीक्षा थानेदार कर रहा है।

- Ans 1. निरीक्षण
 2. निगरानी
 3. देखरेख
 4. जाँच

Question ID : 65497828330
Status : Answered
Chosen Option : 4

Q.7 दिए गए वाक्य का वह भाग ज्ञात करें जिसमें कोई त्रुटि है। यदि कोई त्रुटि नहीं है, तो 'कोई त्रुटि नहीं है' चुनें।

पुस्तकें ये (1)/ किसकी (2) हैं? (3)/ कोई त्रुटि नहीं (4)

- Ans 1. 3
 2. 4
 3. 2
 4. 1

Question ID : 65497828328
Status : Answered
Chosen Option : 4

Q.8 दिए गए वाक्य में रेखांकित खंड को प्रतिस्थापित करने के लिए सबसे उपयुक्त विकल्प का चयन करें। यदि इसे प्रतिस्थापित करने की आवश्यकता नहीं है, तो विकल्प 'किसी बदलाव की आवश्यकता नहीं है' का चयन करें।

सचिव ने अध्यक्ष के गले में एक गुलाब के फूलों की माला पहनाई।

- Ans
- 1. किसी बदलाव की आवश्यकता नहीं है।
 - 2. गुलाब के फूलों की माला पहनाई।
 - 3. एक गुलाबों के फूलों की माला पहनाई।
 - 4. गुलाब के फूलों की एक माला पहनाई।

Question ID : 65497828313

Status : Answered

Chosen Option : 4

Q.9 रिक्त स्थान को भरने के लिए सबसे उपयुक्त शब्द का चयन करें।

_____ लोगो की यही धारणा है।

- Ans
- 1. कम
 - 2. अधिकतर
 - 3. ज्यादा
 - 4. अधिक

Question ID : 65497828322

Status : Answered

Chosen Option : 2

Q.10 दिए गए वाक्य का वह भाग ज्ञात करें जिसमें कोई त्रुटि है। यदि कोई त्रुटि नहीं है, तो 'कोई त्रुटि नहीं है' चुनें।

कश्मीर में (1)/ अनेक दर्शनीय स्थल (2)/ देखने योग्य हैं। (3)/ कोई त्रुटि नहीं है (4)

- Ans
- 1. 3
 - 2. 1
 - 3. 2
 - 4. 4

Question ID : 65497828325

Status : Answered

Chosen Option : 1

Q.11 निम्नलिखित प्रश्न में दिए गए चार विकल्पों में से, उस विकल्प का चयन करें, जो दिए गए मुहावरे के अर्थ को व्यक्त करता है।

खोदा पहाड़ निकली चुहिया

- Ans
- 1. दिखावा ही दिखावा करना
 - 2. अटपटा काम करना
 - 3. अधिक परिश्रम के बाद साधारण लाभ
 - 4. बिना बल कोई काम करना

Question ID : 65497828321

Status : Answered

Chosen Option : 3

Q.12 रिक्त स्थान भरने के लिए सबसे उपयुक्त शब्द का चयन करें।

बहुत से देशों ने एशियाई खेल _____ में भाग लिया।

- Ans
- 1. परीक्षा
 - 2. निरीक्षण
 - 3. प्रतियोगिता
 - 4. परीक्षण

Question ID : 65497828316
Status : Answered
Chosen Option : 3

Q.13 सही वर्तनी वाले शब्द का चयन करें।

- Ans
- 1. ऐश्वर्यशाली
 - 2. ऐश्वर्यशाली
 - 3. ऐशवर्यशाली
 - 4. ऐश्वर्यशालि

Question ID : 65497828323
Status : Answered
Chosen Option : 2

Q.14 रिक्त स्थान को भरने के लिए सबसे उपयुक्त शब्द का चयन करें।

तुम्हारे मित्रों को मैं _____ जानता हूँ।

- Ans
- 1. अच्छी तरह में
 - 2. अच्छे तरह से
 - 3. खूब
 - 4. अच्छी तरह से

Question ID : 65497828319
Status : Answered
Chosen Option : 4

Q.15 'मिट्टी का बना हुआ' वाक्यांश के लिए एक शब्द होगा-

- Ans
- 1. निर्जीव
 - 2. प्रस्तर
 - 3. खिलौना
 - 4. पार्थिव

Question ID : 65497828332
Status : Answered
Chosen Option : 2

Q.16 दिए गए शब्द का विलोम चुनें।

लिप्त

- Ans
- 1. निर्लिप्त
 - 2. विलुप्त
 - 3. अलिप्त
 - 4. विलिप्त

Question ID : 65497828326
Status : Answered
Chosen Option : 3

Q.17 दिए गए वाक्य का वो भाग ज्ञात करें जिसमें कोई त्रुटि है। यदि कोई त्रुटि नहीं है, तो 'कोई त्रुटि नहीं है' चुनें।

अपने गुणों के कारण (1)\ उसका सब जगह (2)\ आदर-सत्कार होता था (3)\ कोई त्रुटि नहीं है (4)

- Ans 1. 1
 2. 4
 3. 3
 4. 2

Question ID : 65497828317
Status : Answered
Chosen Option : 2

Q.18 दिए गए वाक्यांश के लिए एक सार्थक शब्द दीजिए।

जो जानने की इच्छा रखता हो

- Ans 1. जिगीषा
 2. जिज्ञासा
 3. जिगीषु
 4. जिज्ञासु

Question ID : 65497828315
Status : Answered
Chosen Option : 4

Q.19 दिये गये वाक्यांश के लिए एक शब्द दीजिये।

जो उपकारों को नहीं मानता है

- Ans 1. कृतज्ञ
 2. प्रतिपक्षी
 3. कृतघ्न
 4. विरोधी

Question ID : 65497828327
Status : Answered
Chosen Option : 3

Q.20 सही वर्तनी वाले शब्द का चयन करें।

- Ans 1. अनुकरणीय
 2. अनुकरणिय
 3. अनुकरणिय
 4. अनुकरणीय

Question ID : 65497828324
Status : Answered
Chosen Option : 1

Comprehension:

दिए गए अनुच्छेद में कुछ शब्द हटा दिए गए हैं। दिए गए विकल्पों की सहायता से रिक्त स्थान भरें। प्रत्येक सख्खा के लिए सबसे उपयुक्त विकल्प का चयन करें।

हम यह कह सकते हैं कि हमारे चारों ओर (1) _____, वहीं (2) _____ है। प्रकृति ने हमारे लिए एक (3) _____ एव सुखद आवरण का निर्माण किया था, परन्तु मनुष्य ने (4) _____ सुखों के कारण – उसे (5) _____ कर दिया।

SubQuestion No : 21

Q.21 गद्यांश के रिक्त स्थान (1) के लिए सर्वाधिक उपयुक्त शब्द होगा-

- Ans 1. विद्यमान
 2. प्रतिदान
 3. ओझल
 4. अप्राप्य

Question ID : 65497828334

Status : Answered

Chosen Option : 1

Comprehension:

दिए गए अनुच्छेद में कुछ शब्द हटा दिए गए हैं। दिए गए विकल्पों की सहायता से रिक्त स्थान भरें। प्रत्येक सख्खा के लिए सबसे उपयुक्त विकल्प का चयन करें।

हम यह कह सकते हैं कि हमारे चारों ओर (1) _____, वहीं (2) _____ है। प्रकृति ने हमारे लिए एक (3) _____ एव सुखद आवरण का निर्माण किया था, परन्तु मनुष्य ने (4) _____ सुखों के कारण – उसे (5) _____ कर दिया।

SubQuestion No : 22

Q.22 गद्यांश के रिक्त स्थान (2) के लिए सर्वाधिक उपयुक्त शब्द होगा-

- Ans 1. पर्यावरण
 2. व्यक्ति
 3. समाज
 4. समिति

Question ID : 65497828335

Status : Answered

Chosen Option : 1

Comprehension:

दिए गए अनुच्छेद में कुछ शब्द हटा दिए गए हैं। दिए गए विकल्पों की सहायता से रिक्त स्थान भरें। प्रत्येक सख्खा के लिए सबसे उपयुक्त विकल्प का चयन करें।

हम यह कह सकते हैं कि हमारे चारों ओर (1) _____, वहीं (2) _____ है। प्रकृति ने हमारे लिए एक (3) _____ एव सुखद आवरण का निर्माण किया था, परन्तु मनुष्य ने (4) _____ सुखों के कारण – उसे (5) _____ कर दिया।

SubQuestion No : 23

Q.23 गद्यांश के रिक्त स्थान (3) के लिए सर्वाधिक उपयुक्त शब्द होगा-

- Ans 1. आश्चर्यजनक
 2. अपरम्पार
 3. स्वस्थ
 4. निकृष्ट

Question ID : 65497828336

Status : Answered

Chosen Option : 3

Comprehension:

दिए गए अनुच्छेद में कुछ शब्द हटा दिए गए हैं। दिए गए विकल्पों की सहायता से रिक्त स्थान भरें। प्रत्येक सख्खा के लिए सबसे उपयुक्त विकल्प का चयन करें।

हम यह कह सकते हैं कि हमारे चारों ओर (1) _____, वहीं (2) _____ है। प्रकृति ने हमारे लिए एक (3) _____ एव सुखद आवरण का निर्माण किया था, परन्तु मनुष्य ने (4) _____ सुखों के कारण – उसे (5) _____ कर दिया।

SubQuestion No : 24

Q.24 गद्यांश के रिक्त स्थान (4) के लिए सर्वाधिक उपयुक्त शब्द होगा-

- Ans
- 1. राजनीतिक
 - 2. आध्यात्मिक
 - 3. सांस्कृतिक
 - 4. भौतिक

Question ID : 65497828337

Status : Answered

Chosen Option : 4

Comprehension:

दिए गए अनुच्छेद में कुछ शब्द हटा दिए गए हैं। दिए गए विकल्पों की सहायता से रिक्त स्थान भरें। प्रत्येक सख्खा के लिए सबसे उपयुक्त विकल्प का चयन करें।

हम यह कह सकते हैं कि हमारे चारों ओर (1) _____, वहीं (2) _____ है। प्रकृति ने हमारे लिए एक (3) _____ एव सुखद आवरण का निर्माण किया था, परन्तु मनुष्य ने (4) _____ सुखों के कारण – उसे (5) _____ कर दिया।

SubQuestion No : 25

Q.25 गद्यांश के रिक्त स्थान (5) के लिए सर्वाधिक उपयुक्त शब्द होगा-

- Ans
- 1. उज्वल
 - 2. आकस्मिक
 - 3. दूषित
 - 4. अद्भुत

Question ID : 65497828338

Status : Answered

Chosen Option : 3