



















Practice, Learn and Achieve
Your Goal with Prepp

SSC CHSL Exam

Tier I Previous Paper

Simplifying
Government Exams

 SSC CHSL	 IAS EXAM	 RRB NTPC	 NTSE	 CDS
 SSC CGL	 CBSE UGC NET	 IBPS PO	 NDA	
 SBI PO	 IBPS CLERK	 AFCAT	 SSC JE	 CTET
 CSIR UGC NET	 CAPF	 IBPS RRB		

Combined Higher Secondary Level Examination 2019 Tier I

Roll Number	
Candidate Name	
Venue Name	
Exam Date	19/10/2020
Exam Time	10:00 AM - 11:00 AM
Subject	CHSL Tier 1

Section : English Language (Basic Knowledge)

Q.1 Select the most appropriate option to substitute the underlined segment in the given sentence. If there is no need to substitute it, select 'No improvement'.

Over the past 20 years, there has been a constant decline in the variety of vegetables that we eat because the native varieties are no longer available.

Ans 1. No improvement

2. had been

3. was been

4. is being

Question ID : 424429922

Status : Answered

Chosen Option : 1

Q.2 Select the most appropriate meaning of the given idiom.

Call a spade a spade

Ans 1. Plan to attack someone with rude words

2. Say the truth about something, even if it is not pleasant

3. Lash out unkindly at someone for no reason

4. Say things that are untrue and painful

Question ID : 424429927

Status : Answered

Chosen Option : 2

Q.3 Select the most appropriate ANTONYM of the given word.

BENEVOLENT

Ans 1. Generous

2. Liberal

3. Friendly

4. Stingy

Question ID : 424429924

Status : Answered

Chosen Option : 4

Latest Sarkari Jobs, Govt Exam Results,
Vacancies and updates on one click

Know More

Q.4 Given below are four jumbled sentences. Out of the given options pick the one that gives their correct order.

A. You've probably noticed, with great disappointment, that the battery doesn't seem to last as long as it did when it was brand new.

B. Partial charging is just fine for lithium-ion batteries and can actually have some positive benefits for cell longevity.

C. Smartphone users are forever in search of longer battery life, but unfortunately, battery capacity inevitably declines with age.

D. However, one thing you can do to prolong the life of your battery and handset is partial charging.

- Ans
- 1. CDAB
 - 2. CADB
 - 3. BADC
 - 4. ACDB

Question ID : 424429921

Status : Answered

Chosen Option : 2

Comprehension:

In the following passage some words have been deleted. Fill in the blanks with the help of the alternatives given. Select the most appropriate option for each blank.

At the age of 94, Harbhajan makes barfi only on order and people come to collect the freshly made barfi at her (1)_____. The most remarkable thing is, she manages everything (2)_____ her own, from roasting the gram flour to cutting the (3)_____ shaped barfis. She believes that it is better to wear out than to rust out. Due to her hard work, she received the best (4)_____ when she was named 'entrepreneur of the year'. This 94 year old woman (5)_____ that it's never too late to do a start-up.

SubQuestion No : 5

Q.5 Select the most appropriate option for blank number 1.

- Ans
- 1. residence
 - 2. residing
 - 3. resident
 - 4. residential

Question ID : 424429915

Status : Answered

Chosen Option : 1

Comprehension:

In the following passage some words have been deleted. Fill in the blanks with the help of the alternatives given. Select the most appropriate option for each blank.

At the age of 94, Harbhajan makes barfi only on order and people come to collect the freshly made barfi at her (1)_____. The most remarkable thing is, she manages everything (2)_____ her own, from roasting the gram flour to cutting the (3)_____ shaped barfis. She believes that it is better to wear out than to rust out. Due to her hard work, she received the best (4)_____ when she was named 'entrepreneur of the year'. This 94 year old woman (5)_____ that it's never too late to do a start-up.

SubQuestion No : 6

Q.6 Select the most appropriate option for blank number 2.

- Ans
- 1. to
 - 2. on
 - 3. for
 - 4. with

Question ID : 424429916

Status : Answered

Chosen Option : 2

Comprehension:

In the following passage some words have been deleted. Fill in the blanks with the help of the alternatives given. Select the most appropriate option for each blank.

At the age of 94, Harbhajan makes barfi only on order and people come to collect the freshly made barfi at her (1)_____. The most remarkable thing is, she manages everything (2)_____ her own, from roasting the gram flour to cutting the (3)_____ shaped barfis. She believes that it is better to wear out than to rust out. Due to her hard work, she received the best (4)_____ when she was named 'entrepreneur of the year'. This 94 year old woman (5)_____ that it's never too late to do a start-up.

SubQuestion No : 7

Q.7 Select the most appropriate option for blank number 3.

- Ans
- 1. truly
 - 2. happily
 - 3. hardly
 - 4. perfectly

Question ID : 424429917

Status : Answered

Chosen Option : 4

Comprehension:

In the following passage some words have been deleted. Fill in the blanks with the help of the alternatives given. Select the most appropriate option for each blank.

At the age of 94, Harbhajan makes barfi only on order and people come to collect the freshly made barfi at her (1)_____. The most remarkable thing is, she manages everything (2)_____ her own, from roasting the gram flour to cutting the (3)_____ shaped barfis. She believes that it is better to wear out than to rust out. Due to her hard work, she received the best (4)_____ when she was named 'entrepreneur of the year'. This 94 year old woman (5)_____ that it's never too late to do a start-up.

SubQuestion No : 8

Q.8 Select the most appropriate option for blank number 4.

- Ans 1. appreciation
 2. gratefulness
 3. charm
 4. content

Question ID : 424429918
 Status : Answered
 Chosen Option : 1

Comprehension:

In the following passage some words have been deleted. Fill in the blanks with the help of the alternatives given. Select the most appropriate option for each blank.

At the age of 94, Harbhajan makes barfi only on order and people come to collect the freshly made barfi at her (1)_____. The most remarkable thing is, she manages everything (2)_____ her own, from roasting the gram flour to cutting the (3)_____ shaped barfis. She believes that it is better to wear out than to rust out. Due to her hard work, she received the best (4)_____ when she was named 'entrepreneur of the year'. This 94 year old woman (5)_____ that it's never too late to do a start-up.

SubQuestion No : 9

Q.9 Select the most appropriate option for blank number 5.

- Ans 1. has proved
 2. was proved
 3. had been proving
 4. is proved

Question ID : 424429919
 Status : Answered
 Chosen Option : 1

Q.10 Select the correct indirect form of the given sentence.

Ravina asked her little brother, "Where are you going to play?"

- Ans 1. Ravina asked her little brother where he was going to play.
 2. Ravina said to her little brother where he was going to play.
 3. Ravina asked her little brother where he would like to go to play.
 4. Ravina asked her little brother where will he be going to play.

Question ID : 424429911
 Status : Answered

Latest Sarkari Jobs, Govt Exam Results,
 Vacancies and updates on one click

Know More

Q.11 In the given sentence, identify the segment which contains a grammatical error.

The country has to struggled with the problems of child labour.

- Ans
- 1. the country has
 - 2. to struggled with
 - 3. child labour
 - 4. the problems of

Question ID : 424429912
Status : Answered
Chosen Option : 2

Q.12 Select the INCORRECTLY spelt word.

- Ans
- 1. Disposeable
 - 2. Harass
 - 3. Heavenly
 - 4. Advisable

Question ID : 424429928
Status : Answered
Chosen Option : 1

Q.13 In the given sentence, identify the segment which contains a grammatical error.

The Indian cricket team was done very well this year and is ranked number one now.

- Ans
- 1. and is ranked number one now
 - 2. this year
 - 3. The Indian cricket team
 - 4. was done very well

Question ID : 424429913
Status : Answered
Chosen Option : 4

Q.14 Select the word which means the same as the group of words given.

One who examines accounts officially

- Ans
- 1. Auditor
 - 2. Collector
 - 3. Aviator
 - 4. Radiator

Question ID : 424429931
Status : Answered
Chosen Option : 1

Q.15 Select the INCORRECTLY spelt word.

- Ans
- 1. Equivalent
 - 2. Unsurpassable
 - 3. Imigration
 - 4. Inadvertent

Question ID : 424429929
Status : Answered
Chosen Option : 3

Q.16 Select the most appropriate option to substitute the underlined segment in the given sentence. If there is no need to substitute it, select 'No improvement'.

Swami Vivekanand's vast knowledge of Eastern and Western culture appealed to all those who come in contacts with him.

- Ans
- 1. that comes to contact
 - 2. No improvement
 - 3. which contacted
 - 4. who came in contact

Question ID : 424429923
Status : Answered
Chosen Option : 4

Q.17 Select the most appropriate synonym of the given word.

REMORSE

- Ans
- 1. Indifference
 - 2. Reproach
 - 3. Affection
 - 4. Regret

Question ID : 424429933
Status : Answered
Chosen Option : 4

Q.18 Select the most appropriate word to fill in the blank.

In _____ of the great work he is doing for economically weaker children, he has been given a special award.

- Ans
- 1. resolution
 - 2. recognition
 - 3. award
 - 4. reward

Question ID : 424429934
Status : Answered
Chosen Option : 2

Q.19 Select the correct passive form of the given sentence.

They are laying new telephone cables in our colony.

- Ans 1. New telephone cables are being laid in our colony.
 2. New telephone cables were laid in our colony.
 3. New telephone cables were being laid in our colony.
 4. New telephone cables will be laid in our colony.

Question ID : 424429910
Status : Answered
Chosen Option : 1

Q.20 Select the most appropriate word to fill in the blank.

We found it _____ to climb further due to bad weather and decided to give up the expedition.

- Ans 1. impossible
 2. boring
 3. exciting
 4. pleasant

Question ID : 424429935
Status : Answered
Chosen Option : 1

Q.21 Given below are four jumbled sentences. Out of the given options, pick the one that gives their correct order.

- A. So, what exactly are we eating?
B. They found that the vegetables contained very high, toxic levels of banned pesticides, and the pesticide levels were more than 1000 times the permissible levels.
C. And is our food giving rise to the many health problems today?
D. A survey conducted by the Food Safety and Standards Authority of India under the Union Agriculture Ministry tested random samples of vegetables in markets all over India.

- Ans 1. ADCB
 2. DBAC
 3. DACB
 4. ACBD

Question ID : 424429920
Status : Answered
Chosen Option : 2

Q.22 Select the most appropriate meaning of the given idiom.

Be behind the times

- Ans
- 1. Be very old
 - 2. Not be alert
 - 3. Always dreaming
 - 4. Be old fashioned

Question ID : **424429926**
Status : **Answered**
Chosen Option : **4**

Q.23 Select the word which means the same as the group of words given.

Repetition of an initial sound in two or more words of a line

- Ans
- 1. Assonance
 - 2. Rhythm
 - 3. Alliteration
 - 4. Rhyme

Question ID : **424429930**
Status : **Answered**
Chosen Option : **3**

Q.24 Select the most appropriate **ANTONYM** of the given word.

CONSPICUOUS

- Ans
- 1. Obscure
 - 2. Apparent
 - 3. Distinct
 - 4. Noticeable

Question ID : **424429925**
Status : **Answered**
Chosen Option : **3**

Q.25 Select the most appropriate synonym of the given word.

TIMID

- Ans
- 1. Shy
 - 2. Willful
 - 3. Kind
 - 4. Strong

Question ID : **424429932**
Status : **Answered**
Chosen Option : **1**

Q.1 'House' is related to 'Foundation' in the same way as 'Tree' is related to '_____'.
Ans

- 1. Root
- 2. Branch
- 3. Stem
- 4. Soil

Question ID : 424429947
Status : Answered
Chosen Option : 1

Q.2 Select the combination of letters that when sequentially placed in the blanks of the given letter series will complete the series.

a _ cdeacdd _ acdeea __ deac __ e

- Ans
- 1. aaaccd
 - 2. ceacce
 - 3. bbbcbd
 - 4. ceaccd

Question ID : 424429948
Status : Answered
Chosen Option : 4

Q.3 Select the option in which the words share the same relationship as that shared by the given pair of words.

Stringent : Flexible

- Ans
- 1. Anxious : Depressed
 - 2. Responsive : Passionate
 - 3. Daring : Venturesome
 - 4. Authoritarian : Liberal

Question ID : 424429950
Status : Answered
Chosen Option : 4

Q.4 Arrange the following words in a logical and meaningful order.

1. Throat
2. Bladder
3. Pupil
4. Liver
5. Pinna

- Ans
- 1. 3-5-1-2-4
 - 2. 3-5-1-4-2
 - 3. 5-3-1-2-4
 - 4. 5-3-1-4-2

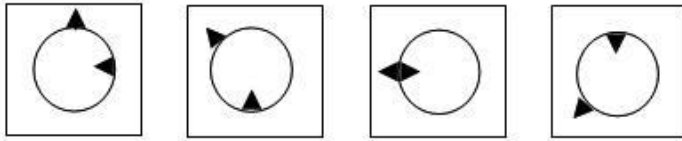
Question ID : 424429943
Status : Answered
Chosen Option : 2

Q.5 If '-' means multiplication, '×' means addition, '÷' means subtraction, and '+' means 'division', then which of the following equations is correct?

- Ans
- 1. $8 + 3 \div 16 \times 36 - 6 = 14$
 - 2. $8 - 3 \div 16 \times 36 + 6 = 14$
 - 3. $8 \div 3 - 16 + 36 \times 6 = 14$
 - 4. $8 \times 3 \div 16 + 36 - 6 = 14$

Question ID : 424429937
Status : Answered
Chosen Option : 2

Q.6 Select the option figure that will come next in the following series.



Ans

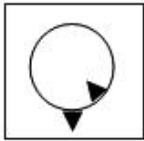
1.



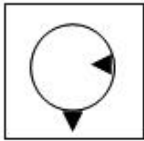
2.



3.



4.



Question ID : 424429955
Status : Answered
Chosen Option : 4

Q.7 Four letter-clusters have been given, out of which three are alike in some manner and one is different. Select the odd letter-cluster.

Ans

1. VSPMJ

2. YWUSQ

3. TQNKH

4. ROLIF

Question ID : 424429951
Status : Answered
Chosen Option : 2

Q.8 Select the option that is related to the third letter-cluster in the same way as the second letter-cluster is related to the first letter-cluster.

RICH : IRXS :: BOOK : ?

Ans

1. XKKO

2. DQQM

3. YLLP

4. ZLLH

Latest Sarkari Jobs, Govt Exam Results,
Vacancies and updates on one click

Know More

4429946
swered

Q.9 Four words have been given, out of which three are alike in some manner and one is different. Select the odd one.

- Ans**
- 1. Den
 - 2. Burrow
 - 3. Stable
 - 4. Barrack

Question ID : 424429952

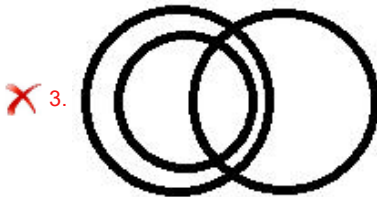
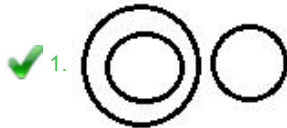
Status : Answered

Chosen Option : 2

Q.10 Select the Venn diagram that best illustrates the relationship between the following classes.

Table, Transistor, Furniture

Ans

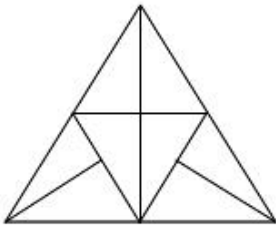


Question ID : 424429960

Status : Answered

Chosen Option : 1

Q.11 How many triangles are present in the following figure?



- Ans
- 1. 13
 - 2. 15
 - 3. 17
 - 4. 12

Question ID : 424429956
Status : Answered
Chosen Option : 2

Q.12 Select the number that can replace the question mark (?) in the following series.

99, 82, 63, 50, 35, ?

- Ans
- 1. 26
 - 2. 27
 - 3. 24
 - 4. 25

Question ID : 424429941
Status : Answered
Chosen Option : 1

Q.13 Anita is the sister of Babita and Dharmendar is the brother of Sushma. If Sushma is the sister of Anita, then how is Babita related to Sushma?

- Ans
- 1. Brother
 - 2. Information is incomplete
 - 3. Aunt
 - 4. Sister

Question ID : 424429949
Status : Answered
Chosen Option : 2

Q.14 Select the option in which the numbers are related in the same way as are the numbers of the following set.

(25, 20, 16)

- Ans**
- 1. (28, 18, 12)
 - 2. (32, 16, 8)
 - 3. (30, 17, 10)
 - 4. (34, 19, 9)

Question ID : 424429940
Status : Answered
Chosen Option : 2

Q.15 Select the option in which the numbers are related in the same way as are the numbers of the following set.

(12, 48, 8)

- Ans**
- 1. (15, 45, 12)
 - 2. (18, 54, 13)
 - 3. (16, 64, 13)
 - 4. (19, 57, 15)

Question ID : 424429939
Status : Answered
Chosen Option : 1

Q.16 Select the option in which the numbers share the same relationship as that shared by the given pair of numbers.

2197 : 1331

- Ans**
- 1. 1331 : 729
 - 2. 343 : 125
 - 3. 512 : 216
 - 4. 729 : 343

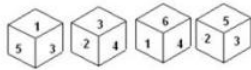
Question ID : 424429938
Status : Answered
Chosen Option : 1

Q.17 In a certain code language, THAILAND is written as VFCGNYPB. How will SRILANKA be written as in that language?

- Ans**
- 1. UQKKCMMZ
 - 2. TQJKBPJC
 - 3. UPKJCLMY
 - 4. UTKNCMMZ

Question ID : 424429944
Status : Answered
Chosen Option : 4

Q.18 Four different positions of the same dice are shown. Select the number that will be on the face opposite to the face having number '1'.



- Ans**
- 1. 5
 - 2. 4
 - 3. 2
 - 4. 6

Question ID : 424429954
Status : Answered
Chosen Option : 3

Q.19 Read the given statements and conclusions carefully. Assuming that the information given in the statements is true, even if it appears to be at variance with commonly known facts, decide which of the given conclusions logically follow(s) from the statements.

Statements:

1. Some buses are trucks.
2. All trucks are vans.

Conclusions:

- I. Some buses are vans.
- II. All vans are buses.

- Ans**
- 1. Only conclusion I follows.
 - 2. Only conclusions I and II follow.
 - 3. Either conclusion I or II follows.
 - 4. Only conclusion II follows.

Question ID : 424429953
Status : Answered
Chosen Option : 1

Q.20 In a certain code language, RAMP is coded as 46 and HORSE is coded as 63. How will CARPENTER be coded as in that language?

- Ans**
- 1. 98
 - 2. 102
 - 3. 96
 - 4. 100

Question ID : 424429945
Status : Answered
Chosen Option : 1

Q.21 Select the number that can replace the question mark (?) in the following series.

33, 53, 61, 85, 97, ?, 141

- Ans**
- 1. 125
 - 2. 113
 - 3. 123
 - 4. 121

Question ID : 424429942
Status : Answered
Chosen Option : 1

Q.22 Select the option in which the given figure is embedded. (Rotation is not allowed)

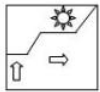


Ans

- 1.
- 2.
- 3.
- 4.

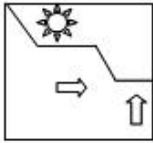
Question ID : 424429957
Status : Answered
Chosen Option : 2

Q.23 Select the correct mirror image of the given figure when the mirror is placed to the right side of the figure.

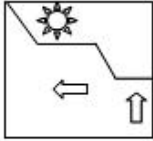


Ans

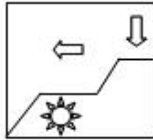
X 1.



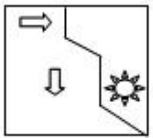
✓ 2.



X 3.



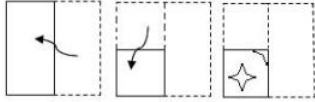
X 4.



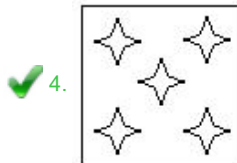
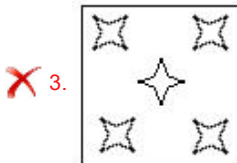
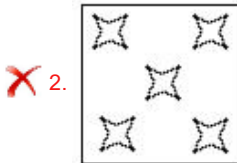
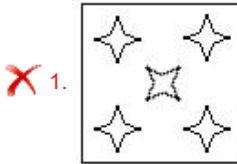
Question ID : **424429959**
Status : **Answered**
Chosen Option : **2**

Prepp

Q.24 The sequence of folding a piece of paper and the manner in which the folded paper has been cut is shown in the following figures. How would this paper look when unfolded?



Ans



Question ID : 424429958

Status : Answered

Chosen Option : 4

Q.25 Raman's age is twice to the age of his daughter Shruti. If ten years ago Raman's age was three times to the age of Shruti, then what is the present age of Shruti?

1. 8 years

2. 20 years

3. 11 years

4. 12 years

Question ID : 424429936

Status : Answered

Chosen Option : 2

Section : Quantitative Aptitude(Basic Arithmetic Skill)

Latest Sarkari Jobs, Govt Exam Results,
Vacancies and updates on one click

Know More

Q.1 In triangle ABC, AD, BE and CF are medians and G is the centroid of the triangle. If the area of the triangle DGC is 20 cm^2 , then the area of triangle AGF + the area of triangle BGF is equal to:

- Ans**
- 1. 30 cm^2
 - 2. 20 cm^2
 - 3. 25 cm^2
 - 4. 40 cm^2

Question ID : 424429973
Status : Answered
Chosen Option : 4

Q.2 The percentage profit earned by selling a mobile for ₹12,000 is equal to the percentage loss incurred by selling the same mobile for ₹9,000. At what price should the mobile be sold to make 20% profit.

- Ans**
- 1. ₹18,800
 - 2. ₹16,200
 - 3. ₹12,600
 - 4. ₹15,400

Question ID : 424429967
Status : Answered
Chosen Option : 3

Q.3 If α and β are two roots of the quadratic equation $ax^2 - bx + c = 0$ where a, b, c are constants and $a \neq 0$, then the value of $\frac{1}{\alpha} + \frac{1}{\beta}$ is

- Ans**
- 1. $\frac{-b}{c}$
 - 2. $\frac{c}{b}$
 - 3. $\frac{c}{a}$
 - 4. $\frac{b}{c}$

Question ID : 424429975
Status : Answered
Chosen Option : 4

Q.4 What percentage of the numbers from 101 to 1000 have 9 in the unit's digit?

- Ans
- 1. 10%
 - 2. 12%
 - 3. 20%
 - 4. 15%

Question ID : 424429966
Status : Answered
Chosen Option : 1

Q.5 A wire in the shape of a circle of radius 28 cm is bent in the form of a square. What is the difference of their areas?

(Take $\pi = \frac{22}{7}$)

- Ans
- 1. 530 cm²
 - 2. 532 cm²
 - 3. 538 cm²
 - 4. 528 cm²

Question ID : 424429971
Status : Answered
Chosen Option : 4

Q.6 If $X - \frac{1}{X} = 8$, find the value of $X^4 + \frac{1}{X^4}$

- Ans
- 1. 4355
 - 2. 4352
 - 3. 4356
 - 4. 4354

Question ID : 424429976
Status : Answered
Chosen Option : 4

Q.7 Find the smallest positive angle which satisfies the given trigonometric equation.

$$2\sin^2x + \sqrt{3}\cos x + 1 = 0$$

Ans

1. $\frac{\pi}{3}$

2. $\frac{2\pi}{3}$

3. $\frac{5\pi}{6}$

4. $\frac{\pi}{6}$

Question ID : 424429981

Status : Answered

Chosen Option : 3

Q.8 By adding 3 and 5 in numerator and denominator of a fraction it becomes $\frac{2}{3}$. If 1 and 3 are subtracted and added from numerator and denominator respectively it becomes $\frac{2}{5}$ find the fraction.

Ans

1. $\frac{5}{7}$

2. $\frac{6}{7}$

3. $\frac{7}{6}$

4. $\frac{7}{5}$

Question ID : 424429968

Status : Answered

Chosen Option : 1

Q.9 The value of $\tan(63^\circ - \theta) - \cot(27^\circ + \theta) + \frac{\operatorname{cosec}^2 70^\circ - \tan^2 20^\circ}{\sec^2 37^\circ - \cot^2 53^\circ}$ is:

Ans

1. 2

2. 3

3. 0

4. 1

Question ID : 424429979

Status : Answered

Chosen Option : 4

Q.10 Simplify the following.

$$4\frac{4}{5} \div \left[2\frac{1}{5} - \frac{1}{2} \left\{ 1\frac{1}{4} - \left(\frac{1}{4} - \frac{1}{5} \right) \right\} \right]$$

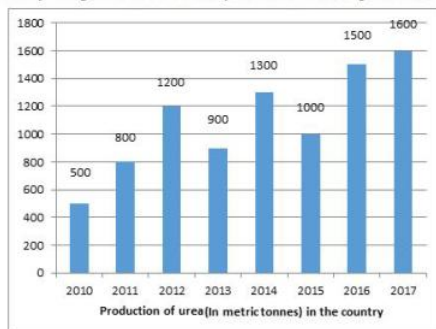
- Ans
- 1. 1
 - 2. 3
 - 3. 2
 - 4. 4

Question ID : 424429978

Status : Answered

Chosen Option : 2

Q.11 Study the given chart carefully and answer the question accordingly.



In which of the following years was the percentage increase in production from the previous year, the maximum among the given years?


- Ans
- 1. 2014
 - 2. 2016
 - 3. 2011
 - 4. 2012

Question ID : 424429982

Status : Answered

Chosen Option : 3

Q.12 Study the given pie-chart and table carefully and answer the question that follows. The percentage-wise distribution of lecturers in five different subjects in a university is shown in the pie-chart. The total number of lecturers is 500.



Ratio of male to female lecturers:

Lecturers	Males : Females
Mathematics	7 : 3
Physics	2 : 3
Chemistry	4 : 1
Botany	3 : 5
Zoology	2 : 5

What is the difference in the number of female lecturers in chemistry and Mathematics?

- Ans**
- 1. 30
 - 2. 22
 - 3. 20
 - 4. 25

Question ID : 424429985
Status : Answered
Chosen Option : 4

Q.13 Evaluate the following.

$$\frac{(12.5)^3 + (7.5)^3}{(12.5)^2 + (7.5)^2 - 12.5 \times 7.5}$$

- Ans**
- 1. 20
 - 2. 25
 - 3. 30
 - 4. 15

Question ID : 424429974
Status : Answered
Chosen Option : 1

Q.14 A person borrowed 1,200 at 8% p.a. and ₹1,800 at 10% p.a. as simple interest for the same period. He had to pay ₹1,380 in all as interest. Find the time period.

- Ans**
- 1. 4 years
 - 2. 10 years
 - 3. 6 years
 - 4. 5 years

Question ID : 424429969
Status : Not Answered
Chosen Option : --

Latest Sarkari Jobs, Govt Exam Results,
Vacancies and updates on one click

Know More

Q.15 A can complete a task in 18 days while B can complete the same task in 12 days. If both work together for 6 days, and then A leaves. In how many days will B complete the task?

- Ans
- 1. 3 days
 - 2. 6 days
 - 3. 2 days
 - 4. 4 days

Question ID : 424429961
Status : Answered
Chosen Option : 3

Q.16 The radii of two circles are 20 cm and 13 cm, respectively. Find the radius of the circle which has a circumference equal to the sum of the circumferences of the two circles.

- Ans
- 1. 33 cm
 - 2. 32 cm
 - 3. 30 cm
 - 4. 28 cm

Question ID : 424429970
Status : Answered
Chosen Option : 1

Q.17 A triangle PQR is right angled at Q. E and F are mid points of QR and PR, respectively. What will be the ratio of the area of the quadrilateral PQEF to the area of triangle PQR.

- Ans
- 1. $\frac{2}{3}$
 - 2. $\frac{3}{4}$
 - 3. $\frac{3}{2}$
 - 4. $\frac{4}{3}$

Question ID : 424429972
Status : Answered
Chosen Option : 2

Q.18 How many numbers between 800 to 2000 are divisible by 13?

- Ans
- 1. 90
 - 2. 92
 - 3. 91
 - 4. 93

Question ID : 424429977
Status : Answered

Latest Sarkari Jobs, Govt Exam Results,
Vacancies and updates on one click

Know More

Q.19 If $x = \operatorname{cosec}A + \cos A$ and $y = \operatorname{cosec}A - \cos A$, then find the value of $\left(\frac{2}{x+y}\right)^2 + \left(\frac{x-y}{2}\right)^2 - 1$.

- Ans**
- 1. 3
 - 2. 0
 - 3. 2
 - 4. 1

Question ID : 424429980

Status : Not Answered

Chosen Option : --

Q.20 The average score of a cricketer for 20 matches is 52 runs. His highest score is more than its lowest score by 120 runs. If these two innings are excluded, the average of the remaining 18 matches is 50 runs. The highest score of the player is:

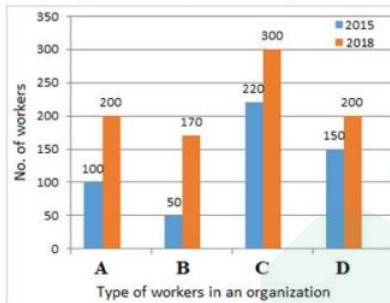
- Ans**
- 1. 140
 - 2. 130
 - 3. 125
 - 4. 120

Question ID : 424429964

Status : Not Answered

Chosen Option : --

Q.21 Study the given chart and answer the question.



The percentage increase in the number of workers in 2018 is maximum as compared to that in 2015 in case of workers of type:

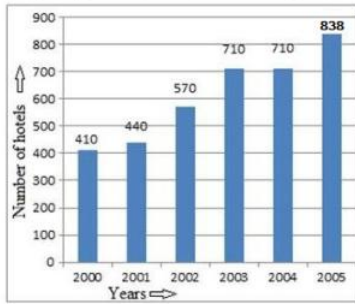
- Ans**
- 1. C
 - 2. B
 - 3. D
 - 4. A

Question ID : 424429984

Status : Answered

Chosen Option : 2

Q.22 Study the given chart and answer the question.



In which of the given years is the percentage increase in the number of hotels in comparison to the previous year, is the maximum?

- Ans
- 1. 2001
 - 2. 2004
 - 3. 2002
 - 4. 2003

Question ID : 424429983

Status : Answered

Chosen Option : 1

Q.23 The breadth of rectangular field is two-thirds of its length. If its area is 864 m^2 , then find the cost of fencing it all around at ₹15/m.

- Ans
- 1. ₹2,000
 - 2. ₹1,800
 - 3. ₹1,600
 - 4. ₹2,400

Question ID : 424429963

Status : Answered

Chosen Option : 2

Q.24 A man travelled a distance of 1200 km in 16 hours. He travelled partly by car at a speed of 40 km/h, and partly by train at a speed of 80 km/h. what is the distance travelled by car?

- Ans
- 1. 100 km
 - 2. 120 km
 - 3. 96 km
 - 4. 80 km

Question ID : 424429962

Status : Not Answered

Chosen Option : --

Q.25 The marked price of a shirt was ₹1,800. A man bought the same shirt for ₹1,200 after getting two successive discounts.
If the first discount was 12%, what was the second discount rate? (Correct to two decimal place)

- Ans**
- 1. 25.25%
 - 2. 22.22%
 - 3. 24.24%
 - 4. 20.20%

Question ID : 424429965
Status : **Not Answered**
Chosen Option : --

Section : **General Awareness**

Q.1 The script 'Gurumukhi' for Punjabi language was invented by the Sikh guru _____.

- Ans**
- 1. Guru Angad
 - 2. Guru Har Kishan
 - 3. Guru Ramdas
 - 4. Guru Har Rai

Question ID : 424429989
Status : **Answered**
Chosen Option : 1

Q.2 Identify the unit of measurement of energy.

- Ans**
- 1. Ampere
 - 2. Joule
 - 3. Volt
 - 4. Watt

Question ID : 424429997
Status : **Answered**
Chosen Option : 2

Q.3 Which of the following is NOT a North East Indian sister state?

- Ans**
- 1. Odisha
 - 2. Manipur
 - 3. Meghalaya
 - 4. Tripura

Question ID : 424429999
Status : **Answered**
Chosen Option : 1

Q.4 Who among the following is NOT a lawn tennis champion?

- Ans
- 1. Leander Paes
 - 2. Rohan Bopanna
 - 3. Sania Mirza
 - 4. Manika Batra

Question ID : 4244291010
Status : Answered
Chosen Option : 4

Q.5 Who has been appointed as the 47th Chief Justice of India?

- Ans
- 1. Ravi Ranjan
 - 2. Sanjay Karol
 - 3. Sharad Arvind Bobde
 - 4. Nilam Sawhney

Question ID : 424429992
Status : Answered
Chosen Option : 3

Q.6 'Santosh Trophy' is an award for the winning team of _____.

- Ans
- 1. hockey
 - 2. football
 - 3. volleyball
 - 4. basketball

Question ID : 4244291009
Status : Answered
Chosen Option : 2

Q.7 Abhijit Banerji, an India born researcher, was one of the winners of Nobel Prize 2019 for _____.

- Ans
- 1. Economics
 - 2. Chemistry
 - 3. Peace
 - 4. Literature

Question ID : 424429990
Status : Answered
Chosen Option : 1

Q.8 The Buddhist sites Vaishali and Nalanda are situated in which of the following states?

- Ans
- 1. Chhattisgarh
 - 2. Bihar
 - 3. Telangana
 - 4. Odisha

Question ID : **424429988**
Status : **Answered**
Chosen Option : **2**

Q.9 Which of the following cricketers is NOT a part of the Sri Lankan team?

- Ans
- 1. Lasith Malinga
 - 2. Angelo Perera
 - 3. Tusara Perera
 - 4. Kedar Jadhav

Question ID : **4244291008**
Status : **Answered**
Chosen Option : **4**

Q.10 Who is the author of 'Sabka Saath, Sabka Vikas'?

- Ans
- 1. Prem Chand
 - 2. Sushma Swaraj
 - 3. Ravi Shankar Prasad
 - 4. Narendra Modi

Question ID : **4244291004**
Status : **Answered**
Chosen Option : **4**

Q.11 On which day of the year is the earth farthest from the sun, at a position called aphelion?

- Ans
- 1. 16 August
 - 2. 23 October
 - 3. 12 May
 - 4. 4 July

Question ID : **4244291001**
Status : **Answered**
Chosen Option : **2**

Q.12 Which is the correct sequence of rulers of the Mughal Empire?

- Ans
- 1. Babur, Humayun, Aurangzeb, Jahangir, Shahjahan, Bahadur Shah, Akbar
 - 2. Babur, Aurangzeb, Humayun, Jahangir, Shahjahan, Bahadur Shah, Akbar
 - 3. Babur, Humayun, Akbar, Jahangir, Shahjahan, Aurangzeb, Bahadur Shah
 - 4. Babur, Jahangir, Humayun, Akbar, Bahadur Shah, Shahjahan, Aurangzeb

Question ID : 4244291003
Status : Answered
Chosen Option : 3

Q.13 _____ is defined as the study of behavior of individual decision-making units, such as consumers, resource owners and firms.

- Ans
- 1. Microeconomics
 - 2. Macroeconomics
 - 3. Health economics
 - 4. Econometrics

Question ID : 424429993
Status : Answered
Chosen Option : 1

Q.14 Which of the following devices is NOT used to enter data into a computer?

- Ans
- 1. Mouse
 - 2. Keyboard
 - 3. Scanner
 - 4. Monitor

Question ID : 424429986
Status : Answered
Chosen Option : 4

Q.15 The human saliva contains an enzyme called salivary _____ that breaks down starch, a complex molecule, into sugar.

- Ans
- 1. lipase
 - 2. amylase
 - 3. peptidase
 - 4. protease

Question ID : 424429996
Status : Answered
Chosen Option : 2

Q.16 What kind of depositional landforms are formed when streams flowing from higher levels break into foot slope plains of low gradient?

- Ans
- 1. Point bars
 - 2. Flood plains
 - 3. Alluvial fans
 - 4. Natural levees

Question ID : 4244291000
Status : Answered
Chosen Option : 2

Q.17 The 'Bharat Ratna Award 2019' was NOT conferred upon:

- Ans
- 1. Bhupen Hazarika (posthumous)
 - 2. Nanaji Deshmukh (posthumous)
 - 3. Medha Patkar
 - 4. Pranab Mukherjee

Question ID : 4244291005
Status : Answered
Chosen Option : 3

Q.18 Which of the following Public Sector Undertakings does NOT have 'Maharatna' status?

- Ans
- 1. Steel Authority of India Limited
 - 2. Engineers India Limited
 - 3. GAIL (India) Limited
 - 4. Coal India Limited

Question ID : 424429994
Status : Answered
Chosen Option : 2

Q.19 'Behdienkhlam' is a traditional dance festival of which state?

- Ans
- 1. Tamil Nadu
 - 2. Gujarat
 - 3. Chhattisgarh
 - 4. Meghalaya

Question ID : 424429987
Status : Not Answered
Chosen Option : --

Q.20 Which Mauryan ruler became a follower of Buddhism?

- Ans
- 1. Samudragupta
 - 2. Brihadratha
 - 3. Ashoka
 - 4. Chandragupta

Question ID : 4244291002
Status : Answered
Chosen Option : 3

Q.21 The President of India can hold office for a term of _____ year/s.

- Ans
- 1. 5
 - 2. 3
 - 3. 1
 - 4. 10

Question ID : 4244291006
Status : Answered
Chosen Option : 1

Q.22 When blue litmus was added to an unknown liquid in a test tube, it turned red. What was the liquid?

- Ans
- 1. An acid
 - 2. Saline
 - 3. An alkali
 - 4. Water

Question ID : 424429995
Status : Answered
Chosen Option : 1

Q.23 Cirrus and cumulus are types of _____.

- Ans
- 1. mountains
 - 2. clouds
 - 3. waves
 - 4. soil

Question ID : 424429998
Status : Answered
Chosen Option : 2

Q.24 Kartarpur Sahib corridor connects Dera Baba Nanak Shrine in Gurdaspur, India to Kartarpur Gurudwara in Pakistan, which is located near the banks of the river _____.

- Ans**
- 1. Ravi
 - 2. Jhelum
 - 3. Sutlej
 - 4. Chenab

Question ID : **424429991**
Status : **Answered**
Chosen Option : 1

Q.25 India is called a secular country because citizens have the fundamental right to:

- Ans**
- 1. freedom of speech and expression
 - 2. move freely throughout India
 - 3. live with human dignity
 - 4. freedom to profess religion of one's choice

Question ID : **4244291007**
Status : **Answered**
Chosen Option : 4



Latest Sarkari jobs, Govt Exam alerts, Results and Vacancies

- ▶ Latest News and Notification
- ▶ Exam Paper Analysis
- ▶ Topic-wise weightage
- ▶ Previous Year Papers with Answer Key
- ▶ Preparation Strategy & Subject-wise Books

To know more [Click Here](#)



www.prepp.in