



Practice, Learn and Achieve
Your Goal with Prepp

ESIC Exam

Previous Paper

Simplifying
Government Exams



SSC CHSL



IAS EXAM



RRB NTPC



NTSE



CDS



SSC CGL



CBSE UGC NET



IBPS PO



NDA



SBI PO



IBPS CLERK



AFCAT



SSC JE



CTET



CSIR UGC NET



CAPF



IBPS RRB

www.prepp.in

Question Paper Preview

Notations :

- Options shown in green color and with ✓ icon are correct.
- Options shown in red color and with ✗ icon are incorrect.

Question Paper Name:	Upper Division Clerks Shift 6
Subject Name:	UPPER DIVISION CLERK UDC
Creation Date:	2016-03-21 12:10:53
Duration:	120
Total Marks:	200
Display Marks:	Yes

Upper Division Clerks Shift 1

Group Number :	1
Group Id :	73681533
Group Maximum Duration :	0
Group Minimum Duration :	120
Revisit allowed for view? :	No
Revisit allowed for edit? :	No
Break time:	0
Mandatory Break time:	No
Group Marks:	200

Numerical Ability

Section Id :	736815127
Section Number :	1
Section type :	Online
Mandatory or Optional:	Mandatory
Number of Questions:	50
Number of Questions to be attempted:	50
Section Marks:	50
Display Number Panel:	Yes
Group All Questions:	No

Sub-Section Number:	1
Sub-Section Id:	736815191
Question Shuffling Allowed :	Yes

Question Number : 1 Question Id : 7368156465 Question Type : MCQ Option Shuffling : Yes Display Question Number : Yes
Single Line Question Option : No Option Orientation : Vertical

Correct : 1 Wrong : 0.25

Convert 89 into a binary number.

Options :

- ✓ 1011001

2. ✘ 110011
3. ✘ 100110
4. ✘ 110110

Question Number : 1 Question Id : 7368156465 Question Type : MCQ Option Shuffling : Yes Display Question Number : Yes
Single Line Question Option : No Option Orientation : Vertical

Correct : 1 Wrong : 0.25

89 को बाइनरी संख्या में परिवर्तित करें।

Options :

1. ✔ 1011001
2. ✘ 110011
3. ✘ 100110
4. ✘ 110110

Question Number : 2 Question Id : 7368156466 Question Type : MCQ Option Shuffling : Yes Display Question Number : Yes
Single Line Question Option : No Option Orientation : Vertical

Correct : 1 Wrong : 0.25

The number of prime factors in $(9)^{24} \times (10)^{14} \times (16)^8$ is:

Options :

1. ✘ 86
2. ✘ 85
3. ✔ 108
4. ✘ 90

Question Number : 2 Question Id : 7368156466 Question Type : MCQ Option Shuffling : Yes Display Question Number : Yes
Single Line Question Option : No Option Orientation : Vertical

Correct : 1 Wrong : 0.25

$(9)^{24} \times (10)^{14} \times (16)^8$ में अभाज्य गुणकों की संख्या _____ है।

Options :

1. ✘ 86
2. ✘ 85
3. ✔ 108
4. ✘ 90

Question Number : 3 Question Id : 7368156467 Question Type : MCQ Option Shuffling : Yes Display Question Number : Yes
Single Line Question Option : No Option Orientation : Vertical

Correct : 1 Wrong : 0.25

What least value must be assigned to * so that the number $500*129$ is divisible by 9?

Options :

1. ✘ 4
2. ✘ 2
3. ✘ 5

4. ✓ 1

Question Number : 3 Question Id : 7368156467 Question Type : MCQ Option Shuffling : Yes Display Question Number : Yes
Single Line Question Option : No Option Orientation : Vertical

Correct : 1 Wrong : 0.25

कौन सा कम से कम मूल्य * की जगह रखा जाना चाहिए ताकि संख्या $500*129, 9$ से विभाज्य हो?

Options :

1. ✗ 4
2. ✗ 2
3. ✗ 5
4. ✓ 1

Question Number : 4 Question Id : 7368156468 Question Type : MCQ Option Shuffling : Yes Display Question Number : Yes
Single Line Question Option : No Option Orientation : Vertical

Correct : 1 Wrong : 0.25

Compute: $1231 \times 999 + 1231$.

Options :

1. ✗ 1231999
2. ✓ 1231000
3. ✗ 1213000
4. ✗ 1213999

Question Number : 4 Question Id : 7368156468 Question Type : MCQ Option Shuffling : Yes Display Question Number : Yes
Single Line Question Option : No Option Orientation : Vertical

Correct : 1 Wrong : 0.25

गणना करें: $1231 \times 999 + 1231$

Options :

1. ✗ 1231999
2. ✓ 1231000
3. ✗ 1213000
4. ✗ 1213999

Question Number : 5 Question Id : 7368156469 Question Type : MCQ Option Shuffling : Yes Display Question Number : Yes
Single Line Question Option : No Option Orientation : Vertical

Correct : 1 Wrong : 0.25

Find the units digit in $(2015)^{2020} + (2011)^{2025}$

Options :

1. ✗ 5
2. ✓ 6
3. ✗ 7
4. ✗ 9

Question Number : 5 Question Id : 7368156469 Question Type : MCQ Option Shuffling : Yes Display Question Number : Yes
Single Line Question Option : No Option Orientation : Vertical

Correct : 1 Wrong : 0.25

$(2015)^{2020} + (2011)^{2025}$ के इकाई अंक को ज्ञात करें?

Options :

1. ✘ 5
2. ✔ 6
3. ✘ 7
4. ✘ 9

Question Number : 6 Question Id : 7368156470 Question Type : MCQ Option Shuffling : Yes Display Question Number : Yes
Single Line Question Option : No Option Orientation : Vertical

Correct : 1 Wrong : 0.25

Compute: $215 \times 625 + 625$.

Options :

1. ✔ 135000
2. ✘ 153000
3. ✘ 150023
4. ✘ 154000

Question Number : 6 Question Id : 7368156470 Question Type : MCQ Option Shuffling : Yes Display Question Number : Yes
Single Line Question Option : No Option Orientation : Vertical

Correct : 1 Wrong : 0.25

गणना करें: $215 \times 625 + 625$

Options :

1. ✔ 135000
2. ✘ 153000
3. ✘ 150023
4. ✘ 154000

Question Number : 7 Question Id : 7368156471 Question Type : MCQ Option Shuffling : Yes Display Question Number : Yes
Single Line Question Option : No Option Orientation : Vertical

Correct : 1 Wrong : 0.25

Raghav studies for $10\frac{2}{3}$ hours daily. He devotes $3\frac{1}{2}$ hours of his time for Science. How much time does he devote for other subjects?

Options :

1. ✔ $5\frac{5}{6}$ hrs
2. ✘ $5\frac{7}{10}$ hrs
3. ✘ $6\frac{9}{10}$ hrs

4. ✘ $6\frac{7}{9}$ hrs

Note: For this question, discrepancy is found in question/answer. Full Marks is being awarded to all candidates.

Question Number : 7 Question Id : 7368156471 Question Type : MCQ Option Shuffling : Yes Display Question Number : Yes
Single Line Question Option : No Option Orientation : Vertical

Correct : 1 Wrong : 0.25

राघव प्रतिदिन $10\frac{2}{3}$ घंटे अध्ययन करता है। वह $3\frac{1}{2}$ घंटे विज्ञान की पढाई करता है। अन्य विषयों की पढाई के लिए वह कितना समय देता है?

Options :

1. ✔ $5\frac{5}{6}$ घंटे

2. ✘ $5\frac{7}{10}$ घंटे

3. ✘ $6\frac{9}{10}$ घंटे

4. ✘ $6\frac{7}{9}$ घंटे

Note: For this question, discrepancy is found in question/answer. Full Marks is being awarded to all candidates.

Question Number : 8 Question Id : 7368156472 Question Type : MCQ Option Shuffling : Yes Display Question Number : Yes
Single Line Question Option : No Option Orientation : Vertical

Correct : 1 Wrong : 0.25

Pandu and Ranga together bought a water bottle that contained $7\frac{1}{2}$ litres of water. Pandu consumed $\frac{1}{6}$ of the water. Remaining water was consumed by Ranga. Find the amount of water consumed by Ranga in litres?

Options :

1. ✘ 5.25L

2. ✘ 8.5L

3. ✘ 7.2L

4. ✔ 6.25L

Question Number : 8 Question Id : 7368156472 Question Type : MCQ Option Shuffling : Yes Display Question Number : Yes
Single Line Question Option : No Option Orientation : Vertical

Correct : 1 Wrong : 0.25

पांडू और रंगा दोनों ने एक साथ पानी की बोतल खरीदी जिसमें $7\frac{1}{2}$ लीटर पानी था। पांडू ने पानी का $\frac{1}{6}$ हिस्सा पिया। शेष पानी रंगा ने पिया। रंगा ने कितने लीटर पानी पिया?

Options :

1. ✘ 5.25 लीटर

2. ✘ 8.5 लीटर

3. ✘ 7.2 लीटर

4. ✓ 6.25 लीटर

Question Number : 9 Question Id : 7368156473 Question Type : MCQ Option Shuffling : Yes Display Question Number : Yes
Single Line Question Option : No Option Orientation : Vertical

Correct : 1 Wrong : 0.25

Raj, Ravi, Lokesh and Lalith finished coloring a picture in $\frac{3}{5}$ hour, $\frac{3}{7}$ hour, $\frac{2}{5}$ hour and $\frac{2}{7}$ hour respectively. Who among the following finished their coloring last?

Options :

1. ✗ Lokesh
2. ✗ Lalith
3. ✗ Ravi
4. ✓ Raj

Question Number : 9 Question Id : 7368156473 Question Type : MCQ Option Shuffling : Yes Display Question Number : Yes
Single Line Question Option : No Option Orientation : Vertical

Correct : 1 Wrong : 0.25

राज, रवि, लोकेश और ललित ने एक चित्र में रंग भरने के कार्य को क्रमशः $\frac{3}{5}$ घंटे, $\frac{3}{7}$ घंटे, $\frac{2}{5}$ घंटे और $\frac{2}{7}$ घंटे में पूरा किया। निम्नलिखित में से किसने रंग भरने का कार्य सबसे आखिर में समाप्त किया?

Options :

1. ✗ लोकेश
2. ✗ ललित
3. ✗ रवि
4. ✓ राज

Question Number : 10 Question Id : 7368156474 Question Type : MCQ Option Shuffling : Yes Display Question Number : Yes
Single Line Question Option : No Option Orientation : Vertical

Correct : 1 Wrong : 0.25

Which among the following is the smallest?

$$\frac{5}{3}, \frac{7}{2}, \frac{9}{2}, \frac{13}{3}$$

Options :

1. ✓ $\frac{5}{3}$
2. ✗ $\frac{9}{2}$
3. ✗ $\frac{7}{2}$
4. ✗ $\frac{13}{3}$

Question Number : 10 Question Id : 7368156474 Question Type : MCQ Option Shuffling : Yes Display Question Number : Yes
Single Line Question Option : No Option Orientation : Vertical

Correct : 1 Wrong : 0.25

निम्नलिखित में से कौन सबसे छोटा है?

$$\frac{5}{3}, \frac{7}{2}, \frac{9}{2}, \frac{13}{3}$$

Options :

1. $\frac{5}{3}$

2. $\frac{9}{2}$

3. $\frac{7}{2}$

4. $\frac{13}{3}$

Question Number : 11 Question Id : 7368156475 Question Type : MCQ Option Shuffling : Yes Display Question Number : Yes
Single Line Question Option : No Option Orientation : Vertical

Correct : 1 Wrong : 0.25

The difference of two numbers is 11 and one-fifth of their sum is 13. Find the largest number.

Options :

1. 35

2. 38

3. 28

4. 15

Question Number : 11 Question Id : 7368156475 Question Type : MCQ Option Shuffling : Yes Display Question Number : Yes
Single Line Question Option : No Option Orientation : Vertical

Correct : 1 Wrong : 0.25

दो अंकों का अंतर 11 है और उनके योग का $\frac{1}{5}$ हिस्सा 13 है। तो सबसे बड़ी संख्या ज्ञात करें।

Options :

1. 35

2. 38

3. 28

4. 15

Question Number : 12 Question Id : 7368156476 Question Type : MCQ Option Shuffling : Yes Display Question Number : Yes
Single Line Question Option : No Option Orientation : Vertical

Correct : 1 Wrong : 0.25

The difference between a number and its two-third is 26. What is the number?

Options :

1. 30

2. 65

3. ✓ 78

4. ✗ 39

Question Number : 12 Question Id : 7368156476 Question Type : MCQ Option Shuffling : Yes Display Question Number : Yes
Single Line Question Option : No Option Orientation : Vertical

Correct : 1 Wrong : 0.25

एक संख्या और उसकी $\frac{2}{3}$ संख्या के बीच का अंतर 26 है। तो वो संख्या कौन सी है?

Options :

1. ✗ 30

2. ✗ 65

3. ✓ 78

4. ✗ 39

Question Number : 13 Question Id : 7368156477 Question Type : MCQ Option Shuffling : Yes Display Question Number : Yes
Single Line Question Option : No Option Orientation : Vertical

Correct : 1 Wrong : 0.25

Find the value of $(-3)^6 \times (3)^{-6} \times (3)^4$

Options :

1. ✗ -81

2. ✗ 27

3. ✓ 81

4. ✗ -108

Question Number : 13 Question Id : 7368156477 Question Type : MCQ Option Shuffling : Yes Display Question Number : Yes
Single Line Question Option : No Option Orientation : Vertical

Correct : 1 Wrong : 0.25

$(-3)^6 \times (3)^{-6} \times (3)^4$ का मान ज्ञात करें:

Options :

1. ✗ -81

2. ✗ 27

3. ✓ 81

4. ✗ -108

Question Number : 14 Question Id : 7368156478 Question Type : MCQ Option Shuffling : Yes Display Question Number : Yes
Single Line Question Option : No Option Orientation : Vertical

Correct : 1 Wrong : 0.25

If $35X2 - 2Y38 = 1554$, then which of the following should come in place of Y?

Options :

1. ✗ 5

2. ✓ 0

3. ✗ 2

4. ✗ 6

Question Number : 14 Question Id : 7368156478 Question Type : MCQ Option Shuffling : Yes Display Question Number : Yes
Single Line Question Option : No Option Orientation : Vertical

Correct : 1 Wrong : 0.25

अगर $35X2-2Y38=1554$ है, तो Y के स्थान पर निम्नलिखित में से कौन सी संख्या होनी चाहिए?

Options :

1. ✘ 5
2. ✔ 0
3. ✘ 2
4. ✘ 6

Question Number : 15 Question Id : 7368156479 Question Type : MCQ Option Shuffling : Yes Display Question Number : Yes
Single Line Question Option : No Option Orientation : Vertical

Correct : 1 Wrong : 0.25

Solve :
$$\frac{(419+231)^2 + (419-231)^2}{419 \times 419 + 231 \times 231}$$

Options :

1. ✔ 2
2. ✘ 4
3. ✘ 8
4. ✘ 10

Question Number : 15 Question Id : 7368156479 Question Type : MCQ Option Shuffling : Yes Display Question Number : Yes
Single Line Question Option : No Option Orientation : Vertical

Correct : 1 Wrong : 0.25

हल करें:
$$\frac{(419+231)^2 + (419-231)^2}{419 \times 419 + 231 \times 231}$$

Options :

1. ✔ 2
2. ✘ 4
3. ✘ 8
4. ✘ 10

Question Number : 16 Question Id : 7368156480 Question Type : MCQ Option Shuffling : Yes Display Question Number : Yes
Single Line Question Option : No Option Orientation : Vertical

Correct : 1 Wrong : 0.25

The present salary of Somesh is Rs.14800. This will be increased by 6.5% in the next year.
What will be the increased salary of Somesh?

Options :

1. ✔ Rs.15762
2. ✘ Rs.15850
3. ✘ Rs.14500
4. ✘ Rs.14950

Question Number : 16 Question Id : 7368156480 Question Type : MCQ Option Shuffling : Yes Display Question Number : Yes
Single Line Question Option : No Option Orientation : Vertical

Correct : 1 Wrong : 0.25

सोमेश का वर्तमान वेतन रु. 14800 है। अगले वर्ष इसमें 6.5% की वृद्धि की जाएगी। तो वेतनवृद्धि के बाद सोमेश का वेतन कितना होगा?

Options :

1. ✓ रु. 15762
2. ✗ रु. 15850
3. ✗ रु. 14500
4. ✗ रु. 14950

Question Number : 17 Question Id : 7368156481 Question Type : MCQ Option Shuffling : Yes Display Question Number : Yes
Single Line Question Option : No Option Orientation : Vertical

Correct : 1 Wrong : 0.25

In an examination, 96% of the candidates passed and 800 failed. How many candidates appeared for the examination?

Options :

1. ✗ 13500
2. ✗ 14000
3. ✗ 12000
4. ✓ 20000

Question Number : 17 Question Id : 7368156481 Question Type : MCQ Option Shuffling : Yes Display Question Number : Yes
Single Line Question Option : No Option Orientation : Vertical

Correct : 1 Wrong : 0.25

एक परीक्षा में, 96% उम्मीदवार उत्तीर्ण हुए और 800 अनुत्तीर्ण हो गए हैं। तो कुल कितने उम्मीदवार परीक्षा के लिए उपस्थित थे?

Options :

1. ✗ 13500
2. ✗ 14000
3. ✗ 12000
4. ✓ 20000

Question Number : 18 Question Id : 7368156482 Question Type : MCQ Option Shuffling : Yes Display Question Number : Yes
Single Line Question Option : No Option Orientation : Vertical

Correct : 1 Wrong : 0.25

What percent of three hours is 480 seconds?

Options :

1. ✗ 4.5%
2. ✗ 5.5%
3. ✓ 4.44%
4. ✗ 2.5%

Question Number : 18 Question Id : 7368156482 Question Type : MCQ Option Shuffling : Yes Display Question Number : Yes
Single Line Question Option : No Option Orientation : Vertical

Correct : 1 Wrong : 0.25

तीन घंटे का कितना प्रतिशत 480 सेकंड होता है?

Options :

1. ✘ 4.5%
2. ✘ 5.5%
3. ✔ 4.44%
4. ✘ 2.5%

Question Number : 19 Question Id : 7368156483 Question Type : MCQ Option Shuffling : Yes Display Question Number : Yes
Single Line Question Option : No Option Orientation : Vertical

Correct : 1 Wrong : 0.25

Express 75paise: 4rupee 50paise in its simplest form.

Options :

1. ✘ 1:8
2. ✔ 1:6
3. ✘ 4:5
4. ✘ 5:4

Question Number : 19 Question Id : 7368156483 Question Type : MCQ Option Shuffling : Yes Display Question Number : Yes
Single Line Question Option : No Option Orientation : Vertical

Correct : 1 Wrong : 0.25

75 पैसे : 4 रुपये 50 पैसे को उनके सरलतम रूप में दर्शाएँ।

Options :

1. ✘ 1:8
2. ✔ 1:6
3. ✘ 4:5
4. ✘ 5:4

Question Number : 20 Question Id : 7368156484 Question Type : MCQ Option Shuffling : Yes Display Question Number : Yes
Single Line Question Option : No Option Orientation : Vertical

Correct : 1 Wrong : 0.25

Two numbers are in ratio 5:6. If 5 is subtracted from each, the ratio becomes 4:5. Find the smallest number.

Options :

1. ✘ 26
2. ✘ 30
3. ✘ 24
4. ✔ 25

Question Number : 20 Question
Single Line Question Option : N
Correct : 1 Wrong : 0.25

Latest Sarkari Jobs, Govt Exam Results,
Vacancies and updates on one click

Know More

lay Question Number : Yes

दो संख्या 5:6 के अनुपात में हैं। यदि प्रत्येक संख्या में से 5 घटाया जाता है, तो अनुपात 4:5 हो जाएगा। तो सबसे छोटी संख्या ज्ञात करें।

Options :

1. ✘ 26
2. ✘ 30
3. ✘ 24
4. ✔ 25

Question Number : 21 Question Id : 7368156485 Question Type : MCQ Option Shuffling : Yes Display Question Number : Yes
Single Line Question Option : No Option Orientation : Vertical

Correct : 1 Wrong : 0.25

A bag contains 50paise, 25paise and 10paise coins in the ratio 5:3:2 amounting to Rs.138/-. Find the number of 25paise coins.

Options :

1. ✘ 163
2. ✘ 175
3. ✘ 150
4. ✔ 120

Question Number : 21 Question Id : 7368156485 Question Type : MCQ Option Shuffling : Yes Display Question Number : Yes
Single Line Question Option : No Option Orientation : Vertical

Correct : 1 Wrong : 0.25

एक बैग में 50, 25, और 10 पैसे के सिक्के 5:3:2 के अनुपात में रखे हुए हैं, जो कुल मिलाकर रु.138 है। तो उनमें से 25 पैसे के सिक्कों की संख्या ज्ञात करें।

Options :

1. ✘ 163
2. ✘ 175
3. ✘ 150
4. ✔ 120

Question Number : 22 Question Id : 7368156486 Question Type : MCQ Option Shuffling : Yes Display Question Number : Yes
Single Line Question Option : No Option Orientation : Vertical

Correct : 1 Wrong : 0.25

Find the average of 160,260,360,460,560?

Options :

1. ✔ 360
2. ✘ 1225
3. ✘ 1220
4. ✘ 244

Question Number : 22 Question Id : 7368156486 Question Type : MCQ Option Shuffling : Yes Display Question Number : Yes
Single Line Question Option : No Option Orientation : Vertical

Correct : 1 Wrong : 0.25

160, 260, 360, 460, 560 की औसत निकालें।

Options :

1. ✓ 360
2. ✗ 1225
3. ✗ 1220
4. ✗ 244

Question Number : 23 Question Id : 7368156487 Question Type : MCQ Option Shuffling : Yes Display Question Number : Yes
Single Line Question Option : No Option Orientation : Vertical

Correct : 1 Wrong : 0.25

The average of 6 quantities is 9. The average of four of them is 9. What is the average of remaining quantities?

Options :

1. ✗ 29
2. ✗ 15
3. ✓ 9
4. ✗ 30

Question Number : 23 Question Id : 7368156487 Question Type : MCQ Option Shuffling : Yes Display Question Number : Yes
Single Line Question Option : No Option Orientation : Vertical

Correct : 1 Wrong : 0.25

6 चीजों की औसत मात्रा 9 है। उनमें से चार की औसत 9 है। शेष मात्रा की औसत कितनी होगी?

Options :

1. ✗ 29
2. ✗ 15
3. ✓ 9
4. ✗ 30

Question Number : 24 Question Id : 7368156488 Question Type : MCQ Option Shuffling : Yes Display Question Number : Yes
Single Line Question Option : No Option Orientation : Vertical

Correct : 1 Wrong : 0.25

The average monthly income of X and Y is Rs.6900. The average monthly income of X and Z is Rs.6000 and the average monthly income of Y and Z is Rs.5100. The monthly income of Y is?

Options :

1. ✗ Rs.4500
2. ✓ Rs.6000
3. ✗ Rs.6125
4. ✗ Rs.5800

Question Number : 24 Question
Single Line Question Option : N

Latest Sarkari Jobs, Govt Exam Results,
Vacancies and updates on one click

Know More

lay Question Number : Yes

Correct : 1 Wrong : 0.25

X और Y की औसत मासिक आय रु. 6900 है। X और Z की औसत मासिक आय रु. 6000 है, और Y और Z की औसत मासिक आय रु. 5100 है। Y की मासिक आय कितनी होगी?

Options :

1. ✘ रु. 4500
2. ✔ रु. 6000
3. ✘ रु. 6125
4. ✘ रु. 5800

Question Number : 25 Question Id : 7368156489 Question Type : MCQ Option Shuffling : Yes Display Question Number : Yes Single Line Question Option : No Option Orientation : Vertical

Correct : 1 Wrong : 0.25

Find the amount at simple interest on Rs.8400 for 2 years 9 months at 10% per annum.

Options :

1. ✔ Rs.10710
2. ✘ Rs.10715
3. ✘ Rs.13800
4. ✘ Rs.13900

Question Number : 25 Question Id : 7368156489 Question Type : MCQ Option Shuffling : Yes Display Question Number : Yes Single Line Question Option : No Option Orientation : Vertical

Correct : 1 Wrong : 0.25

2 वर्ष 9 महीनों के लिए प्रति वर्ष 10% की दर से रु. 8400 पर साधारण ब्याज की राशि ज्ञात करें।

Options :

1. ✔ रु. 10710
2. ✘ रु. 10715
3. ✘ रु. 13800
4. ✘ रु. 13900

Question Number : 26 Question Id : 7368156490 Question Type : MCQ Option Shuffling : Yes Display Question Number : Yes Single Line Question Option : No Option Orientation : Vertical

Correct : 1 Wrong : 0.25

Simple interest on a certain sum is $\frac{1}{16}$ of the sum. Find the time, if both time and rate percent are numerically equal.

Options :

1. ✘ $1\frac{1}{2}$ years
2. ✘ $1\frac{1}{15}$ years
3. ✘ 2 years

4. ✓ $2\frac{1}{2}$ years

Question Number : 26 Question Id : 7368156490 Question Type : MCQ Option Shuffling : Yes Display Question Number : Yes
Single Line Question Option : No Option Orientation : Vertical

Correct : 1 Wrong : 0.25

एक निश्चित राशि पर साधारण ब्याज की राशी $\frac{1}{16}$ है। अगर समय और दर दोनों प्रतिशत संख्यानुसार बराबर हैं, तो समय ज्ञात करें।

Options :

1. ✗ $1\frac{1}{2}$ वर्ष

2. ✗ $1\frac{1}{15}$ वर्ष

3. ✗ 2 वर्ष

4. ✓ $2\frac{1}{2}$ वर्ष

Question Number : 27 Question Id : 7368156491 Question Type : MCQ Option Shuffling : Yes Display Question Number : Yes
Single Line Question Option : No Option Orientation : Vertical

Correct : 1 Wrong : 0.25

Simple interest for a sum of Rs.5400 for 2 years is Rs.60 more than the simple interest for Rs.4900 for the same duration. Find the rate of interest.

Options :

1. ✗ 2%

2. ✗ 5%

3. ✓ 6%

4. ✗ 3%

Question Number : 27 Question Id : 7368156491 Question Type : MCQ Option Shuffling : Yes Display Question Number : Yes
Single Line Question Option : No Option Orientation : Vertical

Correct : 1 Wrong : 0.25

2 वर्ष के लिए रु. 5400 की राशि का होनेवाला साधारण ब्याज समान अवधि के लिए रु. 4900 की राशि के साधारण ब्याज की तुलना में रु. 60 से अधिक है। तो ब्याज की दर ज्ञात करें।

Options :

1. ✗ 2%

2. ✗ 5%

3. ✓ 6%

4. ✗ 3%

Question Number : 28 Question Id : 7368156492 Question Type : MCQ Option Shuffling : Yes Display Question Number : Yes
Single Line Question Option : No Option Orientation : Vertical

Correct : 1 Wrong : 0.25

A watch costing Rs.1250 has been sold for Rs.1300. The percentage of profit was?

Options :

1. ✘ 14%
2. ✔ 4%
3. ✘ 21%
4. ✘ 10%

Question Number : 28 Question Id : 7368156492 Question Type : MCQ Option Shuffling : Yes Display Question Number : Yes
Single Line Question Option : No Option Orientation : Vertical

Correct : 1 Wrong : 0.25

यदि रु. 1250 की कीमत के एक घड़ी को रु. 1300 में बेच दिया जाता है, तो इसमें लाभ का प्रतिशत कितना था?

Options :

1. ✘ 14%
2. ✔ 4%
3. ✘ 21%
4. ✘ 10%

Question Number : 29 Question Id : 7368156493 Question Type : MCQ Option Shuffling : Yes Display Question Number : Yes
Single Line Question Option : No Option Orientation : Vertical

Correct : 1 Wrong : 0.25

Sharanya sells an article for Rs.4200. She loses 65% in the bargain. What was the price at which she bought it?

Options :

1. ✔ Rs.12000
2. ✘ Rs.16000
3. ✘ Rs.15550
4. ✘ Rs.12500

Question Number : 29 Question Id : 7368156493 Question Type : MCQ Option Shuffling : Yes Display Question Number : Yes
Single Line Question Option : No Option Orientation : Vertical

Correct : 1 Wrong : 0.25

शरण्या ने रु. 4200 को एक वस्तु बेच दी है। उसे सौदेबाजी में 65% का नुकसान होता है। तो उसने वह कितनी कीमत पर खरीदा था?

Options :

1. ✔ रु. 12000
2. ✘ रु. 16000
3. ✘ रु. 15550
4. ✘ रु. 12500

Question Number : 30 Question Id : 7368156494 Question Type : MCQ Option Shuffling : Yes Display Question Number : Yes
Single Line Question Option : No Option Orientation : Vertical

Correct : 1 Wrong : 0.25

Prasanna bought an article for Rs.1844. Due to some defects in it, she had pay Rs.156 to the mechanic for its repair. Then, she sold it for Rs.1700. Find her loss percent.

Options :

1. ✘ 5.5%
2. ✘ 2.46%
3. ✔ 15%
4. ✘ 2.5%

Question Number : 30 Question Id : 7368156494 Question Type : MCQ Option Shuffling : Yes Display Question Number : Yes Single Line Question Option : No Option Orientation : Vertical

Correct : 1 Wrong : 0.25

प्रसन्ना ने रु. 1844 में एक वस्तु खरीदी है। इसमें कुछ दोष होने के कारण, इसकी मरम्मत के लिए उसने मैकेनिक को रु. 156 का भुगतान किया। फिर, उस वस्तु को रु. 1700 में बेच दिया। इस व्यवहार में हुए नुकसान का प्रतिशत ज्ञात करें।

Options :

1. ✘ 5.5%
2. ✘ 2.46%
3. ✔ 15%
4. ✘ 2.5%

Question Number : 31 Question Id : 7368156495 Question Type : MCQ Option Shuffling : Yes Display Question Number : Yes Single Line Question Option : No Option Orientation : Vertical

Correct : 1 Wrong : 0.25

An item is sold at Rs.516 by allowing a discount of 14% on its marked price. The marked price of the item is

Options :

1. ✘ Rs.700
2. ✔ Rs.600
3. ✘ Rs.650
4. ✘ Rs.680

Question Number : 31 Question Id : 7368156495 Question Type : MCQ Option Shuffling : Yes Display Question Number : Yes Single Line Question Option : No Option Orientation : Vertical

Correct : 1 Wrong : 0.25

एक वस्तु को उसके अंकित मूल्य पर 14% की छूट देकर रु. 516 में बेचा जाता है। तो उस वस्तु का अंकित मूल्य कितना होना चाहिए?

Options :

1. ✘ रु. 700
2. ✔ रु. 600
3. ✘ रु. 650
4. ✘ रु. 680

Question Number : 32 Question Id : 7368156496 Question Type : MCQ Option Shuffling : Yes Display Question Number : Yes
Single Line Question Option : No Option Orientation : Vertical

Correct : 1 Wrong : 0.25

What is a single discount equivalent to a discount series of 15% and 10%?

Options :

1. ✓ 23.5%
2. ✗ 23.44%
3. ✗ 25%
4. ✗ 26%

Question Number : 32 Question Id : 7368156496 Question Type : MCQ Option Shuffling : Yes Display Question Number : Yes
Single Line Question Option : No Option Orientation : Vertical

Correct : 1 Wrong : 0.25

15% और 10% की छूट श्रृंखला (discount series) के समतुल्य एक सिंगल छूट निम्नलिखित में से कौन सी होनी चाहिए?

Options :

1. ✓ 23.5%
2. ✗ 23.44%
3. ✗ 25%
4. ✗ 26%

Question Number : 33 Question Id : 7368156497 Question Type : MCQ Option Shuffling : Yes Display Question Number : Yes
Single Line Question Option : No Option Orientation : Vertical

Correct : 1 Wrong : 0.25

The marked price of a bicycle is Rs.1596. A shopkeeper allows a discount of 14% and gets a profit of 14%. Find the cost price of the bicycle

Options :

1. ✗ Rs.850
2. ✗ Rs.1000
3. ✗ Rs.900
4. ✓ Rs.1204

Question Number : 33 Question Id : 7368156497 Question Type : MCQ Option Shuffling : Yes Display Question Number : Yes
Single Line Question Option : No Option Orientation : Vertical

Correct : 1 Wrong : 0.25

एक साइकिल का अंकित मूल्य रु. 1596 है। एक दुकानदार इसपर 14% की छूट देता है और उसे 14% का लाभ मिलता है। साइकिल का लागत मूल्य बताएं।

Options :

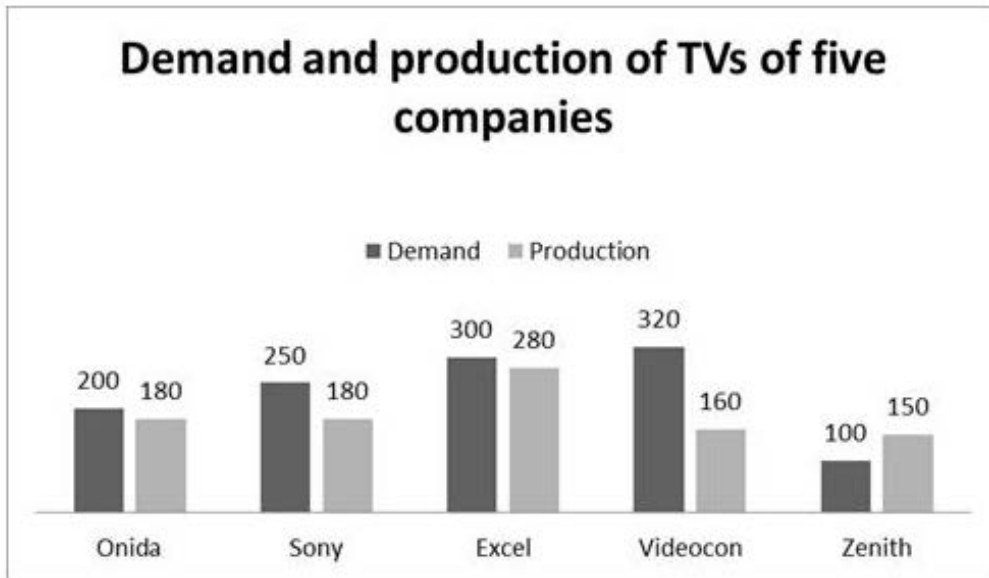
1. ✗ रु. 850
2. ✗ रु. 1000
3. ✗ रु. 900

4. ✓ ₹. 1204

Question Number : 34 Question Id : 7368156498 Question Type : MCQ Option Shuffling : Yes Display Question Number : Yes Single Line Question Option : No Option Orientation : Vertical

Correct : 1 Wrong : 0.25

Study the following table carefully and answer the question that follows.



Which among the following companies, has the least production of TVs?

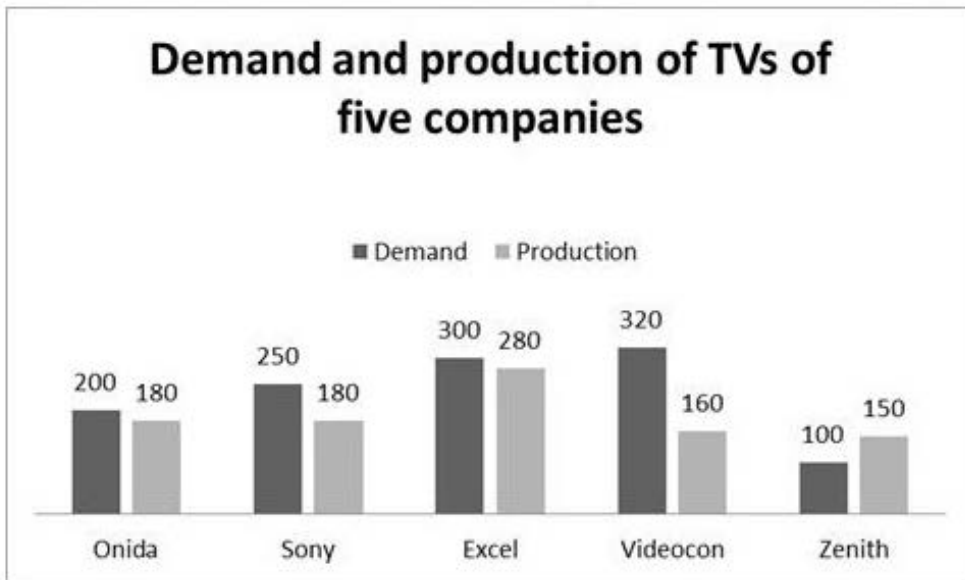
Options :

1. ✗ Excel
2. ✗ Onida
3. ✓ Zenith
4. ✗ Sony

Question Number : 34 Question Id : 7368156498 Question Type : MCQ Option Shuffling : Yes Display Question Number : Yes Single Line Question Option : No Option Orientation : Vertical

Correct : 1 Wrong : 0.25

नीचे दी गई तालिका को ध्यान से पढ़ें और पूछे गए सवाल का जवाब दीजिए।



निम्नलिखित में से कौन सी कंपनी ने, टीवी का सबसे कम उत्पादन किया है?

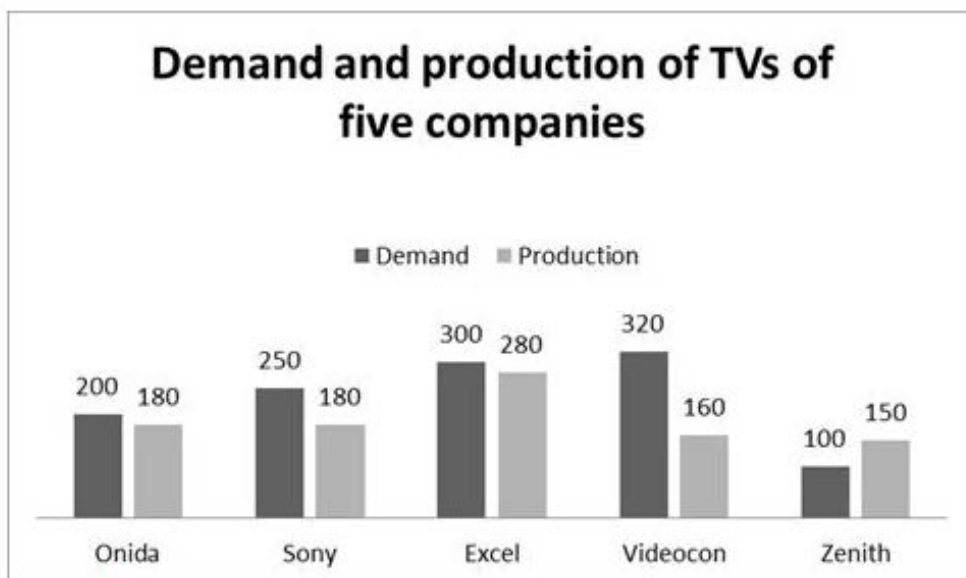
Options :

1. ✘ एक्सेल
2. ✘ ओनिडा
3. ✔ जेनिथ
4. ✘ सोनी

Question Number : 35 Question Id : 7368156499 Question Type : MCQ Option Shuffling : Yes Display Question Number : Yes Single Line Question Option : No Option Orientation : Vertical

Correct : 1 Wrong : 0.25

Study the following table carefully and answer the question that follows.



For which company, the production is more than the demand?

Options :

1. ✘ Excel
2. ✘ Sony

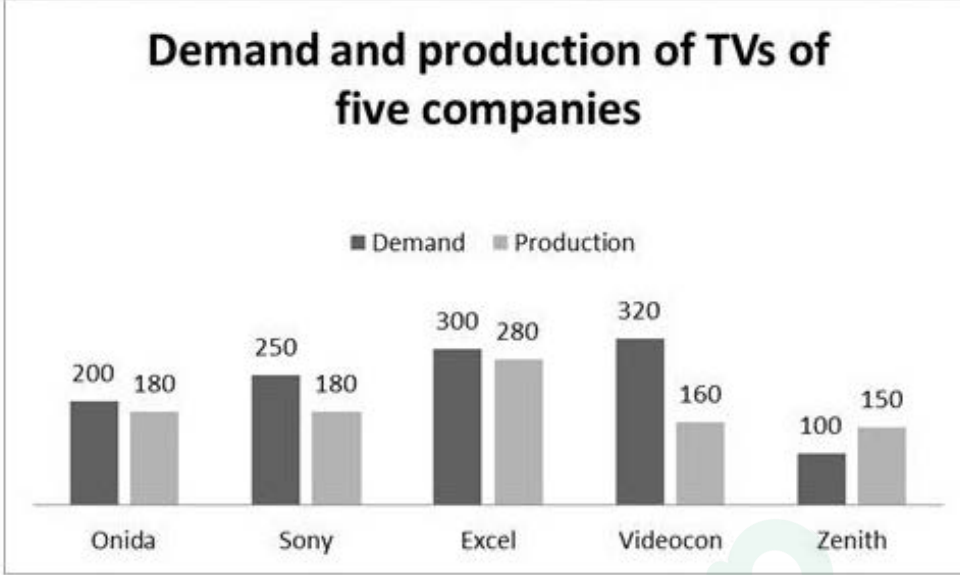
3. ✘ Onida

4. ✔ Zenith

Question Number : 35 Question Id : 7368156499 Question Type : MCQ Option Shuffling : Yes Display Question Number : Yes
Single Line Question Option : No Option Orientation : Vertical

Correct : 1 Wrong : 0.25

नीचे दी गई तालिका को ध्यान से पढ़ें और पूछे गए सवाल का जवाब दीजिए।



कौन सी कंपनी के लिए, उत्पादन मांग से अधिक है?

Options :

1. ✘ एक्सेल

2. ✘ सोनी

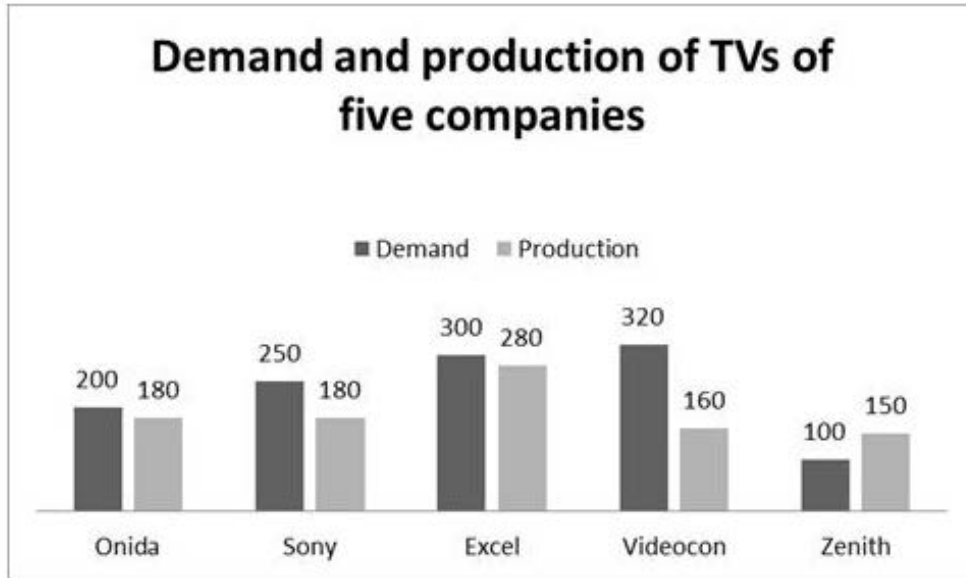
3. ✘ ओनिडा

4. ✔ जेनिथ

Question Number : 36 Question Id : 7368156500 Question Type : MCQ Option Shuffling : Yes Display Question Number : Yes
Single Line Question Option : No Option Orientation : Vertical

Correct : 1 Wrong : 0.25

Study the following table carefully and answer the question that follows.



Which among the following companies, has the greater demand for TVs?

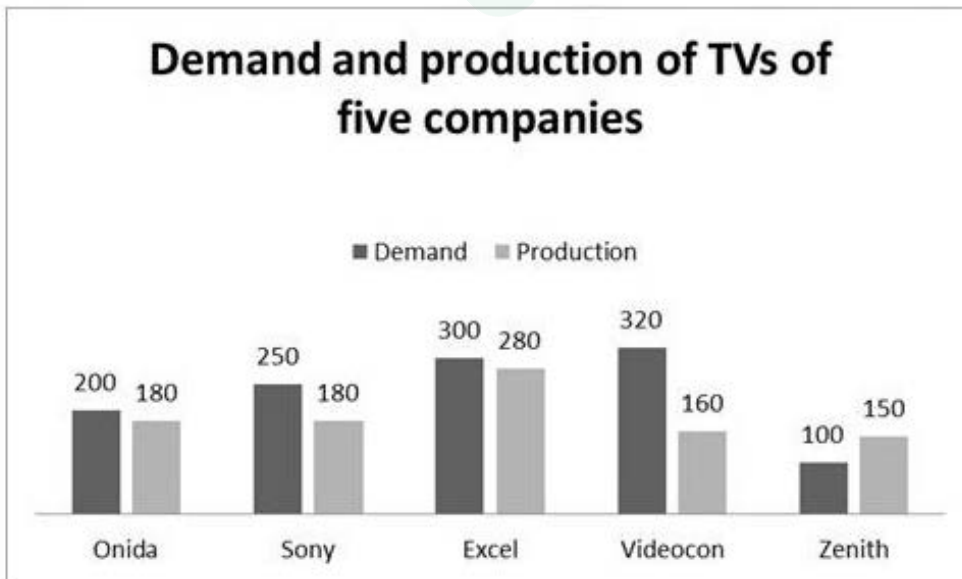
Options :

1. ✘ Sony
2. ✔ Videocon
3. ✘ Excel
4. ✘ Onida

Question Number : 36 Question Id : 7368156500 Question Type : MCQ Option Shuffling : Yes Display Question Number : Yes Single Line Question Option : No Option Orientation : Vertical

Correct : 1 Wrong : 0.25

नीचे दी गई तालिका को ध्यान से पढ़ें और पूछे गए सवाल का जवाब दीजिए।



निम्नलिखित में से कौन सी कंपनी के लिए, टीवी की अधिक मांग है?

Options :

1. ✘ सोनी
2. ✔ विडियोकॉन

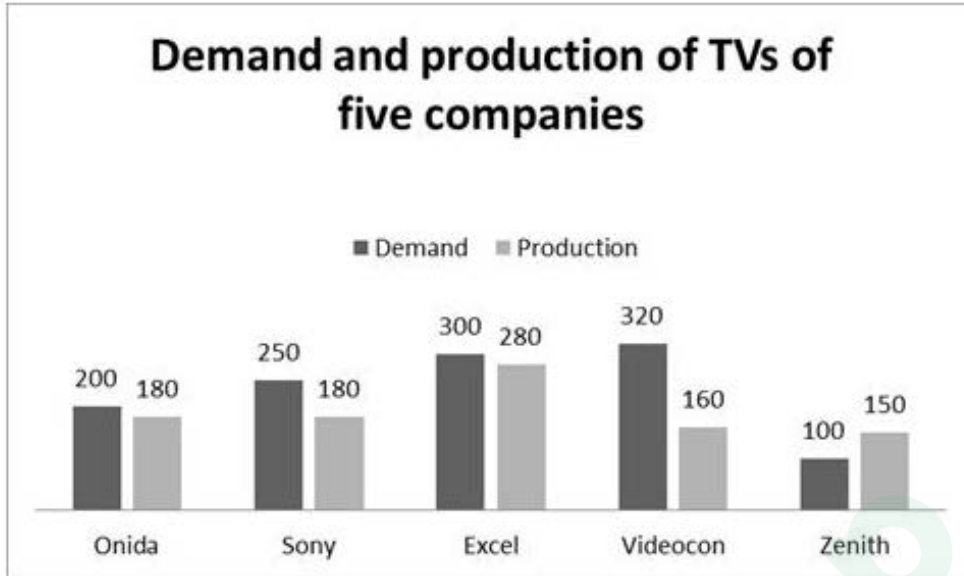
3. ✘ एक्सेल

4. ✘ ओनिडा

Question Number : 37 Question Id : 7368156501 Question Type : MCQ Option Shuffling : Yes Display Question Number : Yes
Single Line Question Option : No Option Orientation : Vertical

Correct : 1 Wrong : 0.25

Study the following table carefully and answer the question that follows.



For which company, the demand is double the production?

Options :

1. ✘ Sony

2. ✔ Videocon

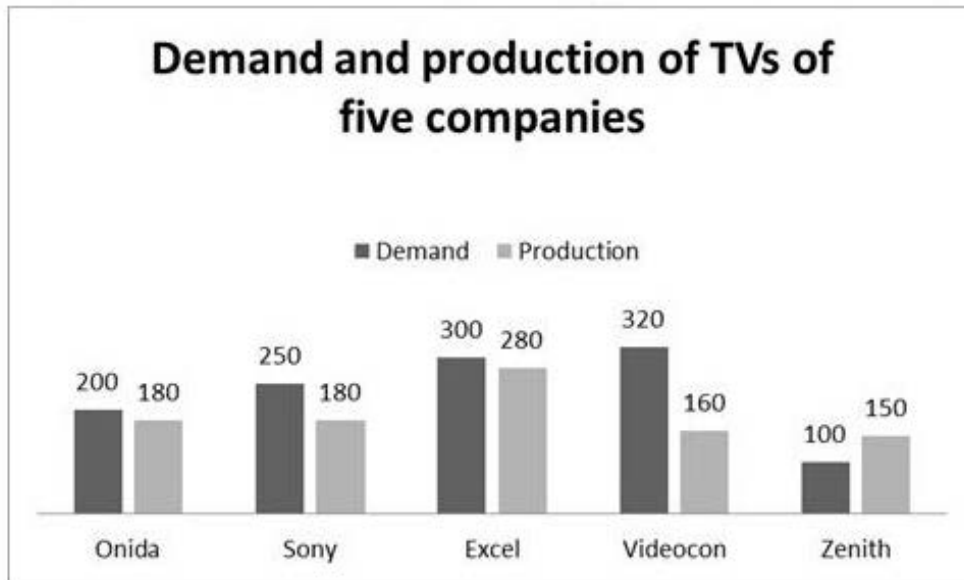
3. ✘ Zenith

4. ✘ Excel

Question Number : 37 Question Id : 7368156501 Question Type : MCQ Option Shuffling : Yes Display Question Number : Yes
Single Line Question Option : No Option Orientation : Vertical

Correct : 1 Wrong : 0.25

नीचे दी गई तालिका को ध्यान से पढ़ें और पूछे गए सवाल का जवाब दीजिए।



कौन सी कंपनी के लिए, मांग उत्पादन से दोगुनी है?

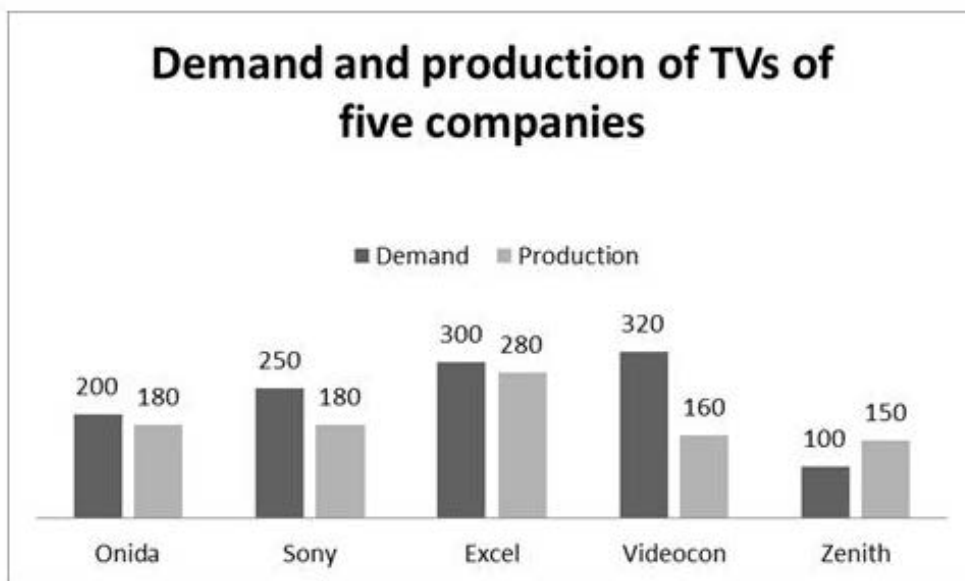
Options :

1. ✘ सोनी
2. ✔ विडियोकॉन
3. ✘ जेनिथ
4. ✘ एक्सेल

Question Number : 38 Question Id : 7368156502 Question Type : MCQ Option Shuffling : Yes Display Question Number : Yes Single Line Question Option : No Option Orientation : Vertical

Correct : 1 Wrong : 0.25

Study the following table carefully and answer the question that follows.



Which among the following companies produces more number of TVs?

Options :

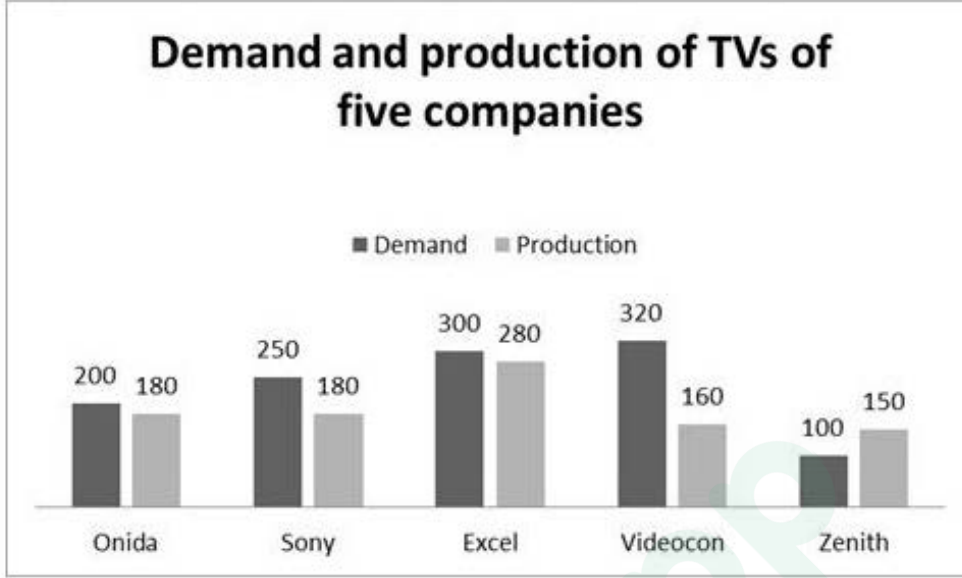
1. ✘ Onida

2. ✘ Sony
3. ✔ Excel
4. ✘ Zenith

Question Number : 38 Question Id : 7368156502 Question Type : MCQ Option Shuffling : Yes Display Question Number : Yes
Single Line Question Option : No Option Orientation : Vertical

Correct : 1 Wrong : 0.25

नीचे दी गई तालिका को ध्यान से पढ़ें और पूछे गए सवाल का जवाब दीजिए।



निम्नलिखित में से कौन सी कंपनी ने, टीवी का अधिक उत्पादन किया है?

Options :

1. ✘ ओनिडा
2. ✘ सोनी
3. ✔ एक्सेल
4. ✘ जेनिथ

Question Number : 39 Question Id : 7368156503 Question Type : MCQ Option Shuffling : Yes Display Question Number : Yes
Single Line Question Option : No Option Orientation : Vertical

Correct : 1 Wrong : 0.25

The area of a square field is $\frac{9}{4}$ hectare. Find the length of its diagonal in metres.

Options :

1. ✔ $150\sqrt{2}$ mts
2. ✘ $50\sqrt{2}$ mts
3. ✘ 140 mts
4. ✘ 125 mts

Question Number : 39 Question Id : 7368156503 Question Type : MCQ Option Shuffling : Yes Display Question Number : Yes
Single Line Question Option : No Option Orientation : Vertical

Correct : 1 Wrong : 0.25

एक वर्ग क्षेत्र का क्षेत्रफल $\frac{9}{4}$ हैक्टर है। इसके विकर्ण की लंबाई को मीटर में पता लगाएं?

Options :

1. ✓ $150\sqrt{2}$ मीटर
2. ✗ $50\sqrt{2}$ मीटर
3. ✗ 140 मीटर
4. ✗ 125 मीटर

Question Number : 40 Question Id : 7368156504 Question Type : MCQ Option Shuffling : Yes Display Question Number : Yes Single Line Question Option : No Option Orientation : Vertical

Correct : 1 Wrong : 0.25

The base of an isosceles triangle is 14cm and its perimeter is 48cm. Find its area.

Options :

1. ✗ 48 cm^2
2. ✗ 84 cm^2
3. ✓ $28\sqrt{15} \text{ cm}^2$
4. ✗ 42 cm^2

Question Number : 40 Question Id : 7368156504 Question Type : MCQ Option Shuffling : Yes Display Question Number : Yes Single Line Question Option : No Option Orientation : Vertical

Correct : 1 Wrong : 0.25

एक समद्विबाहु त्रिकोण का आधार 14 सें.मी. है और इसकी परिधि 48 सें.मी. है। इसका क्षेत्रफल ज्ञात करें।

Options :

1. ✗ 48 वर्ग सें.मी.
2. ✗ 84 वर्ग सें.मी.
3. ✓ $28\sqrt{15}$ वर्ग सें.मी.
4. ✗ 42 वर्ग सें.मी.

Question Number : 41 Question Id : 7368156505 Question Type : MCQ Option Shuffling : Yes Display Question Number : Yes Single Line Question Option : No Option Orientation : Vertical

Correct : 1 Wrong : 0.25

The diameter of the wheel of a car is 42cm. How many revolutions will it make to travel 5.28km?

Options :

1. ✗ 4600
2. ✓ 4000
3. ✗ 6500
4. ✗ 4500

Question Number : 41 Question
Single Line Question Option : N

Latest Sarkari Jobs, Govt Exam Results,
Vacancies and updates on one click

Know More

lay Question Number : Yes

Correct : 1 Wrong : 0.25

एक कार के पहिये का व्यास 42 सें.मी. है। कितने आवर्तनों में 5.28 कि.मी. की यात्रा को यह पूरा करेगी?

Options :

1. ✘ 4600
2. ✔ 4000
3. ✘ 6500
4. ✘ 4500

Question Number : 42 Question Id : 7368156506 Question Type : MCQ Option Shuffling : Yes Display Question Number : Yes Single Line Question Option : No Option Orientation : Vertical

Correct : 1 Wrong : 0.25

A car travels 950km in 12hours and another 250km in 8hours. Find the average speed of the car.

Options :

1. ✔ 60 km/h
2. ✘ 50 km/h
3. ✘ 57 km/h
4. ✘ 48 km/h

Question Number : 42 Question Id : 7368156506 Question Type : MCQ Option Shuffling : Yes Display Question Number : Yes Single Line Question Option : No Option Orientation : Vertical

Correct : 1 Wrong : 0.25

एक कार 12 घंटे में 950 कि.मी. और 8 घंटों में अगले 250 कि.मी. की यात्रा करती है। कार की औसत गति को ज्ञात करें।

Options :

1. ✔ 60 कि.मी./घंटा
2. ✘ 50 कि.मी./घंटा
3. ✘ 57 कि.मी./घंटा
4. ✘ 48 कि.मी./घंटा

Question Number : 43 Question Id : 7368156507 Question Type : MCQ Option Shuffling : Yes Display Question Number : Yes Single Line Question Option : No Option Orientation : Vertical

Correct : 1 Wrong : 0.25

A vehicle travels at 65km/h. How many meters will it travel in 15minutes?

Options :

1. ✘ 17520 mts
2. ✘ 15550 mts
3. ✘ 15620 mts
4. ✔ 16250 mts

Question Number : 43 Question Id : 7368156507 Question Type : MCQ Option Shuffling : Yes Display Question Number : Yes
Single Line Question Option : No Option Orientation : Vertical

Correct : 1 Wrong : 0.25

एक वाहन 65 कि.मी./घंटा की गति से यात्रा करता है। यह 15 मिनट में कितने मीटर की दूरी तय करेगा?

Options :

1. ✘ 17520 मीटर
2. ✘ 15550 मीटर
3. ✘ 15620 मीटर
4. ✔ 16250 मीटर

Question Number : 44 Question Id : 7368156508 Question Type : MCQ Option Shuffling : Yes Display Question Number : Yes
Single Line Question Option : No Option Orientation : Vertical

Correct : 1 Wrong : 0.25

Pawan can cover a certain distance in 2hr 20min by covering two-third of the distance at 4kmph and the rest at 5kmph. Find the total distance.

Options :

1. ✔ 10 km
2. ✘ 10.5 km
3. ✘ 9.5 km
4. ✘ 10.6 km

Question Number : 44 Question Id : 7368156508 Question Type : MCQ Option Shuffling : Yes Display Question Number : Yes
Single Line Question Option : No Option Orientation : Vertical

Correct : 1 Wrong : 0.25

पवन एक निश्चित दूरी को 2 घंटे 20 मिनट में पूरा कर सकता है, जिसमें से दो-तिहाई 4 कि.मी./घंटा गति से और शेष 5 कि.मी./घंटा की गति से तय कर सकता है। तो कुल दूरी को ज्ञात करें।

Options :

1. ✔ 10 कि.मी.
2. ✘ 10.5 कि.मी.
3. ✘ 9.5 कि.मी.
4. ✘ 10.6 कि.मी.

Question Number : 45 Question Id : 7368156509 Question Type : MCQ Option Shuffling : Yes Display Question Number : Yes
Single Line Question Option : No Option Orientation : Vertical

Correct : 1 Wrong : 0.25

Priyamani takes 30minutes to reach school from home. Prakash takes 40minutes to cover the same distance. Find the ratio of time taken by Priyamani to the time taken by Prakash.

Options :

1. ✔ 3:4
2. ✘ 4:3

3. ✘ 2:3

4. ✘ 4:2

Question Number : 45 Question Id : 7368156509 Question Type : MCQ Option Shuffling : Yes Display Question Number : Yes
Single Line Question Option : No Option Orientation : Vertical

Correct : 1 Wrong : 0.25

प्रियामणि को घर से स्कूल तक पहुंचने के लिए 30 मिनट लगते हैं। प्रकाश इतनी ही दूरी को तय करने के लिए 40 मिनट लेता है। प्रियामणि द्वारा लिये गए समय की तुलना में प्रकाश द्वारा लिये गए समय का अनुपात ज्ञात करें।

Options :

1. ✔ 3:4

2. ✘ 4:3

3. ✘ 2:3

4. ✘ 4:2

Question Number : 46 Question Id : 7368156510 Question Type : MCQ Option Shuffling : Yes Display Question Number : Yes
Single Line Question Option : No Option Orientation : Vertical

Correct : 1 Wrong : 0.25

Saloni works in office for 5hours and Likitha works for 4hours 10minutes in her office.
Find the ratio of their working hours.

Options :

1. ✔ 6:5

2. ✘ 5:4

3. ✘ 3:5

4. ✘ 6:7

Question Number : 46 Question Id : 7368156510 Question Type : MCQ Option Shuffling : Yes Display Question Number : Yes
Single Line Question Option : No Option Orientation : Vertical

Correct : 1 Wrong : 0.25

सलोनी अपने कार्यालय में 5 घंटे और लिकिता अपने कार्यालय में 4 घंटे 10 मिनट काम करती है। उनके काम के घंटों का अनुपात ज्ञात करें।

Options :

1. ✔ 6:5

2. ✘ 5:4

3. ✘ 3:5

4. ✘ 6:7

Question Number : 47 Question Id : 7368156511 Question Type : MCQ Option Shuffling : Yes Display Question Number : Yes
Single Line Question Option : No Option Orientation : Vertical

Correct : 1 Wrong : 0.25

The ratio of times taken by A and B to finish a piece of work is 1:5. If A completes the work in 12days, then fi

Options :

1. ✘ 52 days
2. ✘ 45 days
3. ✔ 60 days
4. ✘ 48 days

Question Number : 47 Question Id : 7368156511 Question Type : MCQ Option Shuffling : Yes Display Question Number : Yes
Single Line Question Option : No Option Orientation : Vertical
Correct : 1 Wrong : 0.25

A और B द्वारा एक काम को पूरा करने के लिए लगे हुए समय का अनुपात 1:5 है।
यदि A काम को 12 दिनों में पूरा करता है, तो B द्वारा काम को पूरा करने के लिये लगे हुए समय को ज्ञात करें।

Options :

1. ✘ 52 दिन
2. ✘ 45 दिन
3. ✔ 60 दिन
4. ✘ 48 दिन

Question Number : 48 Question Id : 7368156512 Question Type : MCQ Option Shuffling : Yes Display Question Number : Yes
Single Line Question Option : No Option Orientation : Vertical
Correct : 1 Wrong : 0.25

Karuna can do a work in 5 days and Komali is 15% more expert than Karuna to complete the same work, then find the total time taken to complete the work by Komali.

Options :

1. ✘ $5\frac{1}{2}$ days
2. ✔ $4\frac{8}{23}$ days
3. ✘ 4 days
4. ✘ 6 days

Question Number : 48 Question Id : 7368156512 Question Type : MCQ Option Shuffling : Yes Display Question Number : Yes
Single Line Question Option : No Option Orientation : Vertical
Correct : 1 Wrong : 0.25

करुणा एक काम को 5 दिनों में कर सकती हैं, और कोमली उसी काम को करुणा की तुलना में 15% अधिक अच्छे तरीके से कर सकती है, तो कोमली द्वारा काम को पूरा करने के लिए, लिये गए कुल समय को ज्ञात करें।

Options :

1. ✘ $5\frac{1}{2}$ दिन
2. ✔ $4\frac{8}{23}$ दिन

3. ✘ 4 दिन

4. ✘ 6 दिन

Question Number : 49 Question Id : 7368156513 Question Type : MCQ Option Shuffling : Yes Display Question Number : Yes
Single Line Question Option : No Option Orientation : Vertical

Correct : 1 Wrong : 0.25

If A can do a piece of work in 5days, B can do the same in 6days and C can do the same work in 10days, then working together, how many days will they take to complete the work?

Options :

1. ✘ $2\frac{2}{11}$ days

2. ✘ 9 days

3. ✔ $2\frac{1}{7}$ days

4. ✘ 24 days

Question Number : 49 Question Id : 7368156513 Question Type : MCQ Option Shuffling : Yes Display Question Number : Yes
Single Line Question Option : No Option Orientation : Vertical

Correct : 1 Wrong : 0.25

यदि A एक काम को 5 दिनों में कर सकता है, B उसी काम को 6 दिनों में और C उसी काम को 10 दिनों में कर सकता है, तो एक साथ मिलकर काम को पूरा करने के लिए उन्हें कितने दिन लगेंगे?

Options :

1. ✘ $2\frac{2}{11}$ दिन

2. ✘ 9 दिन

3. ✔ $2\frac{1}{7}$ दिन

4. ✘ 24 दिन

Question Number : 50 Question Id : 7368156514 Question Type : MCQ Option Shuffling : Yes Display Question Number : Yes
Single Line Question Option : No Option Orientation : Vertical

Correct : 1 Wrong : 0.25

30 men can complete a work in 18days. 6days after they started working, 12 more men joined them. How many days will they now take to complete the remaining work?

Options :

1. ✘ $6\frac{2}{3}$ days

2. ✘ $6\frac{1}{5}$ days

3. ✘ $7\frac{2}{3}$ days

4. ✓ $8\frac{4}{7}$ days

Question Number : 50 Question Id : 7368156514 Question Type : MCQ Option Shuffling : Yes Display Question Number : Yes
Single Line Question Option : No Option Orientation : Vertical

Correct : 1 Wrong : 0.25

30 पुरुष 18 दिनों में एक काम को पूरा कर सकते हैं। काम शुरू करने के 6 दिन बाद, 12 और ज्यादा पुरुष उनमें शामिल हो गए। अब शेष काम को वे कितने दिनों में पूरा करेंगे?

Options :

1. ✗ $6\frac{2}{3}$ दिन

2. ✗ $6\frac{1}{5}$ दिन

3. ✗ $7\frac{2}{3}$ दिन

4. ✓ $8\frac{4}{7}$ दिन

English Language

Section Id :	736815128
Section Number :	2
Section type :	Online
Mandatory or Optional:	Mandatory
Number of Questions:	32
Number of Questions to be attempted:	32
Section Marks:	50
Display Number Panel:	Yes
Group All Questions:	No

Sub-Section Number:	1
Sub-Section Id:	736815192
Question Shuffling Allowed :	No

Question Id : 7368156515 Question Type : COMPREHENSION Sub Question Shuffling Allowed : No Group Comprehension
Questions : No

Question Numbers : (51 to 60)

Question Label : Comprehension

Read the passage given below and answer the questions that follow it by choosing the best option for each:

In the simplest terms, cloud computing means storing and accessing data and programs over the Internet instead of your computer's hard drive. The cloud is just a metaphor for the Internet. It goes back to the days of flowcharts and presentations that would represent the gigantic server-farm infrastructure of the Internet as nothing but a puffy, white cumulonimbus cloud, accepting connections and doling out information as it floats.

What cloud computing is not about is your hard drive. When you store data on, or run programs from the hard drive, that's called local storage and computing. Everything you need is physically close to you, which means accessing your data is fast and easy, for that one computer, or others on the local network. Working off your hard drive is how the computer industry functioned for decades; some would argue it's still superior to cloud computing

Storing data on a home or office network does not count as utilizing the cloud. For it to be considered "cloud computing," you need to access your data or your programs over the Internet, or at the very least, have that data synchronized with other information over the Web. In a big business, you may know all there is to know about what's on the other side of the connection; as an individual user, you may never have any idea what kind of massive data-processing is happening on the other end. The end result is the same: with an online connection, cloud computing can be done anywhere, anytime

Sub questions

Question Number : 51 Question Id : 7368156516 Question Type : MCQ Option Shuffling : Yes Display Question Number : Yes Single Line Question Option : No Option Orientation : Vertical

Correct : 1 Wrong : 0.25

The appropriate title for this write-up is

Options :

1. ✘ Cloud computing as a metaphor for Internet
2. ✘ Computing's Cloud Nine!
3. ✘ Know Your Cloud Computing
4. ✔ Local vs Cloud Computing

Question Number : 52 Question Id : 7368156517 Question Type : MCQ Option Shuffling : Yes Display Question Number : Yes Single Line Question Option : No Option Orientation : Vertical

Correct : 1 Wrong : 0.25

The write-up does not explain

Options :

1. ✘ what is cloud computing
2. ✘ what is not computing
3. ✘ what is home networking
4. ✔ what is on the other side of clouds

Question Number : 53 Question Id : 7368156518 Question Type : MCQ Option Shuffling : Yes Display Question Number : Yes Single Line Question Option : No Option Orientation : Vertical

Correct : 1 Wrong : 0.25

The cloud became a metaphor for the Internet, according to the write-up

Options :

- ✘ as the nature and extent of both are unknown
- ✘ as the Internet is a floating storage system from its infancy
- ✔ as the Internet was given the symbol of a cloud in its infancy
- ✘ as the users never had an idea of what happened to their work on their computers

Question Number : 54 Question Id : 7368156519 Question Type : MCQ Option Shuffling : Yes Display Question Number : Yes
Single Line Question Option : No Option Orientation : Vertical

Correct : 1 Wrong : 0.25

In cloud computing all that what we work and save on our computers are

Options :

- ✘ physically close to us and can be accessed easily and freely
- ✔ physically close to us but cannot be accessed easily and freely
- ✘ stored elsewhere but can be accessed easily and freely
- ✘ stored elsewhere and cannot be accessed easily or freely

Question Number : 55 Question Id : 7368156520 Question Type : MCQ Option Shuffling : Yes Display Question Number : Yes
Single Line Question Option : No Option Orientation : Vertical

Correct : 1 Wrong : 0.25

Which ONE of the following is NOT an essential feature of cloud computing?

Options :

- ✘ 'using the Internet',
- ✘ 'accessing from and storing data on the net'
- ✘ 'have data synchronized with other information over the Web'
- ✔ 'massive data processing'

Question Number : 56 Question Id : 7368156521 Question Type : MCQ Option Shuffling : Yes Display Question Number : Yes
Single Line Question Option : No Option Orientation : Vertical

Correct : 1 Wrong : 0.25

While using Google documents, which ONE of the essential features of cloud computing given below is not essential?

Options :

- ✘ using the Internet',
- ✘ 'accessing from and storing data on the net'
- ✘ 'have data synchronized with other information over the Web'
- ✔ 'massive data processing'

Question Number : 57 Question Id : 7368156522 Question Type : MCQ Option Shuffling : Yes Display Question Number : Yes
Single Line Question Option : No Option Orientation : Vertical

Correct : 1 Wrong : 0.25

A 'cumulonimbus cloud' is a heavy and dense cloud in the form of a mountain or huge Tower and often has a flat top, with a dark base. It was used as an icon or a sign in flowcharts. Which one of the following does the write-up NOT modify to qualify it as a 'metaphor'?

Options :

1. ✘ shape
2. ✘ colour
3. ✘ nature
4. ✔ function

Question Number : 58 Question Id : 7368156523 Question Type : MCQ Option Shuffling : Yes Display Question Number : Yes
Single Line Question Option : No Option Orientation : Vertical

Correct : 1 Wrong : 0.25

'Synchronized' here means cause to occur or operate

Options :

1. ✔ at the same time and rate while processing the same data and functions
2. ✘ at either location -- local and 'cloud' -- plus information given above
3. ✘ at the same time but not the same rate while processing the same data and functions
4. ✘ make the data dance in unison at local and 'cloud' locations

Question Number : 59 Question Id : 7368156524 Question Type : MCQ Option Shuffling : Yes Display Question Number : Yes
Single Line Question Option : No Option Orientation : Vertical

Correct : 1 Wrong : 0.25

The hard drive is also known as

Options :

1. ✘ CPU
2. ✘ monitor
3. ✘ computer
4. ✔ 'memory'

Question Number : 60 Question Id : 7368156525 Question Type : MCQ Option Shuffling : Yes Display Question Number : Yes
Single Line Question Option : No Option Orientation : Vertical

Correct : 1 Wrong : 0.25

'Doling' in, as used in the context here, means

Options :

1. ✔ allocating
2. ✘ gifting
3. ✘ distributing
4. ✘ dispensing

Question Id : 7368156515 Question Type : COMPREHENSION Sub Question Shuffling Allowed : No Group Comprehension
Questions : No

Question Numbers : (51 to 60)

Question Label : Comprehension

Read the passage given below and answer the questions that follow it by choosing the best option for each:

In the simplest terms, cloud computing means storing and accessing data and programs over the Internet instead of your computer's hard drive. The cloud is just a metaphor for the Internet. It goes back to the days of flowcharts and presentations that would represent the gigantic server-farm infrastructure of the Internet as nothing but a puffy, white cumulonimbus cloud, accepting connections and doling out information as it floats.

What cloud computing is not about is your hard drive. When you store data on, or run programs from the hard drive, that's called local storage and computing. Everything you need is physically close to you, which means accessing your data is fast and easy, for that one computer, or others on the local network. Working off your hard drive is how the computer industry functioned for decades; some would argue it's still superior to cloud computing. Storing data on a home or office network does not count as utilizing the cloud. For it to be considered "cloud computing," you need to access your data or your programs over the Internet, or at the very least, have that data synchronized with other information over the Web. In a big business, you may know all there is to know about what's on the other side of the connection; as an individual user, you may never have any idea what kind of massive data-processing is happening on the other end. The end result is the same: with an online connection, cloud computing can be done anywhere, anytime

Sub questions

Question Number : 51 Question Id : 7368156516 Question Type : MCQ Option Shuffling : Yes Display Question Number : Yes
Single Line Question Option : No Option Orientation : Vertical

Correct : 1 Wrong : 0.25

The appropriate title for this write-up is

Options :

1. ✘ Cloud computing as a metaphor for Internet
2. ✘ Computing's Cloud Nine!

3. ✘ Know Your Cloud Computing

4. ✔ Local vs Cloud Computing

Question Number : 52 Question Id : 7368156517 Question Type : MCQ Option Shuffling : Yes Display Question Number : Yes
Single Line Question Option : No Option Orientation : Vertical

Correct : 1 Wrong : 0.25

The write-up does not explain

Options :

1. ✘ what is cloud computing
2. ✘ what is not computing
3. ✘ what is home networking
4. ✔ what is on the other side of clouds

Question Number : 53 Question Id : 7368156518 Question Type : MCQ Option Shuffling : Yes Display Question Number : Yes
Single Line Question Option : No Option Orientation : Vertical

Correct : 1 Wrong : 0.25

The cloud became a metaphor for the Internet, according to the write-up,

Options :

1. ✘ as the nature and extent of both are unknown
2. ✘ as the Internet is a floating storage system from its infancy
3. ✔ as the Internet was given the symbol of a cloud in its infancy
as the users never had an idea of what happened to their work on their
4. ✘ computers

Question Number : 54 Question Id : 7368156519 Question Type : MCQ Option Shuffling : Yes Display Question Number : Yes
Single Line Question Option : No Option Orientation : Vertical

Correct : 1 Wrong : 0.25

In cloud computing all that what we work and save on our computers are

Options :

1. ✘ physically close to us and can be accessed easily and freely
2. ✔ physically close to us but cannot be accessed easily and freely
3. ✘ stored elsewhere but can be accessed easily and freely
4. ✘ stored elsewhere and cannot be accessed easily or freely

Question Number : 55 Question Id : 7368156520 Question Type : MCQ Option Shuffling : Yes Display Question Number : Yes
Single Line Question Option : No Option Orientation : Vertical

Correct : 1 Wrong : 0.25

Which ONE of the following is NOT an essential feature of cloud computing?

Options :

1. ✘ 'using the Internet',
2. ✘ 'accessing from and storing data on the net'
3. ✘ 'have data sync

4. ✓ 'massive data processing'

Question Number : 56 Question Id : 7368156521 Question Type : MCQ Option Shuffling : Yes Display Question Number : Yes
Single Line Question Option : No Option Orientation : Vertical

Correct : 1 Wrong : 0.25

While using Google documents, which ONE of the essential features of cloud computing given below is not essential?

Options :

1. ✗ using the Internet',
2. ✗ 'accessing from and storing data on the net'
3. ✗ 'have data synchronized with other information over the Web'
4. ✓ 'massive data processing'

Question Number : 57 Question Id : 7368156522 Question Type : MCQ Option Shuffling : Yes Display Question Number : Yes
Single Line Question Option : No Option Orientation : Vertical

Correct : 1 Wrong : 0.25

A 'cumulonimbus cloud' is a heavy and dense cloud in the form of a mountain or huge Tower and often has a flat top, with a dark base. It was used as an icon or a sign in flowcharts. Which one of the following does the write-up NOT modify to qualify it as a 'metaphor'?

Options :

1. ✗ shape
2. ✗ colour
3. ✗ nature
4. ✓ function

Question Number : 58 Question Id : 7368156523 Question Type : MCQ Option Shuffling : Yes Display Question Number : Yes
Single Line Question Option : No Option Orientation : Vertical

Correct : 1 Wrong : 0.25

'Synchronized' here means cause to occur or operate

Options :

1. ✓ at the same time and rate while processing the same data and functions
2. ✗ at either location -- local and 'cloud' -- plus information given above at the same time but not the same rate while processing the same data and functions
3. ✗ and functions
4. ✗ make the data dance in unison at local and 'cloud' locations

Question Number : 59 Question Id : 7368156524 Question Type : MCQ Option Shuffling : Yes Display Question Number : Yes
Single Line Question Option : No Option Orientation : Vertical

Correct : 1 Wrong : 0.25

The hard drive is also known as

Options :

1. ✗ CPU
2. ✗ monitor

3. ✘ computer

4. ✔ 'memory'

Question Number : 60 Question Id : 7368156525 Question Type : MCQ Option Shuffling : Yes Display Question Number : Yes
Single Line Question Option : No Option Orientation : Vertical

Correct : 1 Wrong : 0.25

'Doling' in, as used in the context here, means

Options :

1. ✔ allocating

2. ✘ gifting

3. ✘ distributing

4. ✘ dispensing

Sub-Section Number: 2
Sub-Section Id: 736815193
Question Shuffling Allowed : No

Question Id : 7368156526 Question Type : COMPREHENSION Sub Question Shuffling Allowed : No Group Comprehension
Questions : No

Question Numbers : (61 to 70)

Question Label : Comprehension

Given below is a passage with ten blanks, numbered from 11 to 20. Fill in the blanks by choosing the correct option given against the corresponding question number:

Data from the Pioneer spacecraft of NASA apparently prove the theory that the high surface temperature of Venus is due to an atmospheric greenhouse effect caused mainly by a blanket of carbon dioxide. Such a greenhouse effect is _____ (11) when energy in the form of sunlight easily _____ (12) through a planet's atmosphere, warms its surface, and is _____ (13) to heat radiation that is then held in by the atmosphere from top to bottom. Venus has a _____ (14) thin atmosphere like the Earth's, but Venus' _____ (15) consists of more than ninety percent carbon dioxide, _____ (16) to less than four percent in that of the _____ (17), our own planet. Because of its higher _____ (18) of carbon dioxide, Venus' atmosphere traps much more _____ (19) radiation than does the Earth's. Thus, the Venus _____ (20) are believed to be important to the understanding of possible adverse effects on the Earth's agriculture that could result from the long-term use of fossil fuels, which add carbon dioxide to the atmosphere.

Sub questions

Question Number : 61 Question Id : 7368156527 Question Type : MCQ Option Shuffling : Yes Display Question Number : Yes
Single Line Question Option : No Option Orientation : Vertical

Correct : 1 Wrong : 0.25

Fill in the blanks by choosing the correct option given against the corresponding question number:

Options :

1. ✘ made

2. ✔ created

3. ✘ revealed

4. ✘ displayed

Question Number : 62 Question Id : 7368156528 Question Type : MCQ Option Shuffling : Yes Display Question Number : Yes
Single Line Question Option : No Option Orientation : Vertical

Correct : 1 Wrong : 0.25

Fill in the blanks by choosing the correct option given against the corresponding question number:

Options :

1. ✔ passes

2. ✘ runs

3. ✘ rises

4. ✘ sets

Question Number : 63 Question Id : 7368156529 Question Type : MCQ Option Shuffling : Yes Display Question Number : Yes
Single Line Question Option : No Option Orientation : Vertical

Correct : 1 Wrong : 0.25

Fill in the blanks by choosing the correct option given against the corresponding question number:

Options :

1. ✘ congealed

2. ✘ modified

3. ✔ converted

4. ✘ improved

Question Number : 64 Question Id : 7368156530 Question Type : MCQ Option Shuffling : Yes Display Question Number : Yes
Single Line Question Option : No Option Orientation : Vertical

Correct : 1 Wrong : 0.25

Fill in the blanks by choosing the correct option given against the corresponding question number:

Options :

1. ✘ adequately

2. ✘ substantially

3. ✘ absolutely

4. ✔ relatively

Question Number : 65 Question Id : 7368156531 Question Type : MCQ Option Shuffling : Yes Display Question Number : Yes
Single Line Question Option : No Option Orientation : Vertical

Correct : 1 Wrong : 0.25

Fill in the blanks by choosing the correct option given against the corresponding question number:

Options :

1. ✘ stratosphere

2. ✘ layer

3. ✔ atmosphere

4. ✘ environment

Question Number : 66 Question Id : 7368156532 Question Type : MCQ Option Shuffling : Yes Display Question Number : Yes
Single Line Question Option : No Option Orientation : Vertical

Correct : 1 Wrong : 0.25

Fill in the blanks by choosing the correct option given against the corresponding question number:

Options :

1. ✘ linked
2. ✔ compared
3. ✘ matched
4. ✘ related

Question Number : 67 Question Id : 7368156533 Question Type : MCQ Option Shuffling : Yes Display Question Number : Yes
Single Line Question Option : No Option Orientation : Vertical

Correct : 1 Wrong : 0.25

Fill in the blanks by choosing the correct option given against the corresponding question number:

Options :

1. ✘ Jupiter
2. ✘ Venus
3. ✘ Mars
4. ✔ Earth

Question Number : 68 Question Id : 7368156534 Question Type : MCQ Option Shuffling : Yes Display Question Number : Yes
Single Line Question Option : No Option Orientation : Vertical

Correct : 1 Wrong : 0.25

Fill in the blanks by choosing the correct option given against the corresponding question number:

Options :

1. ✔ percentage
2. ✘ portion
3. ✘ decimal
4. ✘ percentile

Question Number : 69 Question Id : 7368156535 Question Type : MCQ Option Shuffling : Yes Display Question Number : Yes
Single Line Question Option : No Option Orientation : Vertical

Correct : 1 Wrong : 0.25

Fill in the blanks by choosing the correct option given against the corresponding question number:

Options :

1. ✘ cold
2. ✘ cool
3. ✘ warmth
4. ✔ heat

Question Number : 70 Question Id : 7368156536 Question Type : MCQ Option Shuffling : Yes Display Question Number : Yes
Single Line Question Option : No Option Orientation : Vertical

Correct : 1 Wrong : 0.25

Fill in the blanks by choosing the correct option given against the corresponding question number:

Options :

1. ✘ subject
2. ✘ course
3. ✔ studies
4. ✘ research

Question Id : 7368156526 Question Type : COMPREHENSION Sub Question Shuffling Allowed : No Group Comprehension Questions : No

Question Numbers : (61 to 70)

Question Label : Comprehension

Given below is a passage with ten blanks, numbered from 11 to 20. Fill in the blanks by choosing the correct option given against the corresponding question number:

Data from the Pioneer spacecraft of NASA apparently prove the theory that the high surface temperature of Venus is due to an atmospheric greenhouse effect caused mainly by a blanket of carbon dioxide. Such a greenhouse effect is _____ (11) when energy in the form of sunlight easily _____ (12) through a planet's atmosphere, warms its surface, and is _____ (13) to heat radiation that is then held in by the atmosphere from top to bottom. Venus has a _____ (14) thin atmosphere like the Earth's, but Venus' _____ (15) consists of more than ninety percent carbon dioxide, _____ (16) to less than four percent in that of the _____ (17), our own planet. Because of its higher _____ (18) of carbon dioxide, Venus' atmosphere traps much more _____ (19) radiation than does the Earth's. Thus, the Venus _____ (20) are believed to be important to the understanding of possible adverse effects on the Earth's agriculture that could result from the long-term use of fossil fuels, which add carbon dioxide to the atmosphere.

Sub questions

Question Number : 61 Question Id : 7368156527 Question Type : MCQ Option Shuffling : Yes Display Question Number : Yes Single Line Question Option : No Option Orientation : Vertical

Correct : 1 Wrong : 0.25

Fill in the blanks by choosing the correct option given against the corresponding question number:

Options :

1. ✘ made
2. ✔ created
3. ✘ revealed
4. ✘ displayed

Question Number : 62 Question Id : 7368156528 Question Type : MCQ Option Shuffling : Yes Display Question Number : Yes Single Line Question Option : No Option Orientation : Vertical

Correct : 1 Wrong : 0.25

Fill in the blanks by choosing the correct option given against the corresponding question number:

Options :

- passes
- runs
- rises
- sets

Question Number : 63 Question Id : 7368156529 Question Type : MCQ Option Shuffling : Yes Display Question Number : Yes
Single Line Question Option : No Option Orientation : Vertical

Correct : 1 Wrong : 0.25

Fill in the blanks by choosing the correct option given against the corresponding question number:

Options :

- congealed
- modified
- converted
- improved

Question Number : 64 Question Id : 7368156530 Question Type : MCQ Option Shuffling : Yes Display Question Number : Yes
Single Line Question Option : No Option Orientation : Vertical

Correct : 1 Wrong : 0.25

Fill in the blanks by choosing the correct option given against the corresponding question number:

Options :

- adequately
- substantially
- absolutely
- relatively

Question Number : 65 Question Id : 7368156531 Question Type : MCQ Option Shuffling : Yes Display Question Number : Yes
Single Line Question Option : No Option Orientation : Vertical

Correct : 1 Wrong : 0.25

Fill in the blanks by choosing the correct option given against the corresponding question number:

Options :

- stratosphere
- layer
- atmosphere
- environment

Question Number : 66 Question Id : 7368156532 Question Type : MCQ Option Shuffling : Yes Display Question Number : Yes
Single Line Question Option : No Option Orientation : Vertical

Correct : 1 Wrong : 0.25

Fill in the blanks by choosing the correct option given against the corresponding question number:

Options :

1. ✘ linked
2. ✔ compared
3. ✘ matched
4. ✘ related

Question Number : 67 Question Id : 7368156533 Question Type : MCQ Option Shuffling : Yes Display Question Number : Yes
Single Line Question Option : No Option Orientation : Vertical

Correct : 1 Wrong : 0.25

Fill in the blanks by choosing the correct option given against the corresponding question number:

Options :

1. ✘ Jupiter
2. ✘ Venus
3. ✘ Mars
4. ✔ Earth

Question Number : 68 Question Id : 7368156534 Question Type : MCQ Option Shuffling : Yes Display Question Number : Yes
Single Line Question Option : No Option Orientation : Vertical

Correct : 1 Wrong : 0.25

Fill in the blanks by choosing the correct option given against the corresponding question number:

Options :

1. ✔ percentage
2. ✘ portion
3. ✘ decimal
4. ✘ percentile

Question Number : 69 Question Id : 7368156535 Question Type : MCQ Option Shuffling : Yes Display Question Number : Yes
Single Line Question Option : No Option Orientation : Vertical

Correct : 1 Wrong : 0.25

Fill in the blanks by choosing the correct option given against the corresponding question number:

Options :

1. ✘ cold
2. ✘ cool
3. ✘ warmth
4. ✔ heat

Question Number : 70 Question Id : 7368156536 Question Type : MCQ Option Shuffling : Yes Display Question Number : Yes
Single Line Question Option : No Option Orientation : Vertical

Correct : 1 Wrong : 0.25

Fill in the blanks by choosing the correct option given against the corresponding question number:

Options :

1. ✘ subject
2. ✘ course
3. ✔ studies
4. ✘ research

Sub-Section Number: 3
Sub-Section Id: 736815194
Question Shuffling Allowed : Yes

Question Number : 71 Question Id : 7368156537 Question Type : MCQ Option Shuffling : Yes Display Question Number : Yes
Single Line Question Option : No Option Orientation : Vertical

Correct : 1 Wrong : 0.25

Given below is a set of five sentences, numbered 1 to 5, which are not in a meaningful order. Choose from the options given, the order which will be acceptable and meaningful:

1. The Jorg Gray 6500 Chronometer, originally designed for members of the US Secret Service, was a birthday gift to Barack Obama from a member of his security team.
2. Owning one of these puts you in the same club as the most powerful man in the world; and men like being members of clubs like that.
3. Its success has nothing to do with its design, or a huge marketing campaign, but the fact that it is the timepiece currently favoured by the president of the US.
4. Its commercial success was guaranteed when Obama's watch was identified by a horological hobbyist because of its association.
5. An ordinary, inexpensive watch by a relatively unknown manufacturer has recently racked up millions of sales in America

Options :

1. ✔ 5,3,1,4,2
2. ✘ 5,1,3,4,2
3. ✘ 5,4,3,2,1
4. ✘ 5,2,4,3,1

Question Number : 71 Question Id : 7368156537 Question Type : MCQ Option Shuffling : Yes Display Question Number : Yes
Single Line Question Option : No Option Orientation : Vertical

Correct : 1 Wrong : 0.25

Given below is a set of five sentences, numbered 1 to 5, which are not in a meaningful order. Choose from the options given, the order which will be acceptable and meaningful:

1. The Jorg Gray 6500 Chronometer, originally designed for members of the US Secret Service, was a birthday gift to Barack Obama from a member of his security team.
2. Owning one of these puts you in the same club as the most powerful man in the world; and men like being members of clubs like that.
3. Its success has nothing to do with its design, or a huge marketing campaign, but the fact that it is the timepiece currently favoured by the president of the US.
4. Its commercial success was guaranteed when Obama's watch was identified by a horological hobbyist because of its association.
5. An ordinary, inexpensive watch by a relatively unknown manufacturer has recently racked up millions of sales in America

Options :

1. ✓ 5,3,1,4,2
2. ✗ 5,1,3,4,2
3. ✗ 5,4,3,2,1
4. ✗ 5,2,4,3,1

Question Number : 72 Question Id : 7368156538 Question Type : MCQ Option Shuffling : Yes Display Question Number : Yes Single Line Question Option : No Option Orientation : Vertical

Correct : 1 Wrong : 0.25

Given below is a set of five sentences, numbered 1 to 5, which are not in a meaningful order. Choose from the options given, the order which will be acceptable and meaningful:

1. Another example is our tendency to say 'it is not surprising' and 'it is not astonishing' as surprising colligates with the negative.
2. Collocation is defined as "the occurrence of two or more words within a short space of each other in a text."
3. The first is collocation, which refers to the co-occurrence of lexical items, as in a 'rabid dog'.
4. The other is also a type of collocation but refers to the interrelationship of words and grammatical items – like 'drive a car', but 'drive a pen'.
5. The relationship between two words in a text can be considered in two ways.

Options :

1. ✘ 2,3,4,5,1
2. ✔ 2,5,3,4,1
3. ✘ 2,4,3,1,5
4. ✘ 2,3,4,1,5

Question Number : 72 Question Id : 7368156538 Question Type : MCQ Option Shuffling : Yes Display Question Number : Yes
Single Line Question Option : No Option Orientation : Vertical

Correct : 1 Wrong : 0.25

Given below is a set of five sentences, numbered 1 to 5, which are not in a meaningful order. Choose from the options given, the order which will be acceptable and meaningful:

1. Another example is our tendency to say 'it is not surprising' and 'it is not astonishing' as surprising colligates with the negative.
2. Collocation is defined as "the occurrence of two or more words within a short space of each other in a text."
3. The first is collocation, which refers to the co-occurrence of lexical items, as in a 'rabid dog'.
4. The other is also a type of collocation but refers to the interrelationship of words and grammatical items - like 'drive a car', but 'drive a pen'.
5. The relationship between two words in a text can be considered in two ways.

Options :

1. ✘ 2,3,4,5,1
2. ✔ 2,5,3,4,1
3. ✘ 2,4,3,1,5
4. ✘ 2,3,4,1,5

Question Number : 73 Question Id : 7368156539 Question Type : MCQ Option Shuffling : Yes Display Question Number : Yes
Single Line Question Option : No Option Orientation : Vertical

Correct : 1 Wrong : 0.25

Given below is a set of five sentences, numbered 1 to 5, which are not in a meaningful order. Choose from the options given, the order which will be acceptable and meaningful:

1. But the financial and technical means to rapidly disseminate news to educated and curious readers were absent.
2. Something of a revolution in journalism occurred when the so-called "cheap press".
3. They were made to change their character and became organs of information.
4. Thus was born the great "news" organs of the press, the telegraphic news agencies, as commercial enterprises.
5. Until then the newspapers had been concerned more with ideological arguments than with "news" proper,

Options :

1. ✓ 2,5,3,1,4
2. ✗ 2,3,4,5,1
3. ✗ 2,1,3,4,5
4. ✗ 2,3,5,4,1

Question Number : 73 Question Id : 7368156539 Question Type : MCQ Option Shuffling : Yes Display Question Number : Yes Single Line Question Option : No Option Orientation : Vertical

Correct : 1 Wrong : 0.25

Given below is a set of five sentences, numbered 1 to 5, which are not in a meaningful order. Choose from the options given, the order which will be acceptable and meaningful:

1. But the financial and technical means to rapidly disseminate news to educated and curious readers were absent.
2. Something of a revolution in journalism occurred when the so-called "cheap press".
3. They were made to change their character and became organs of information.
4. Thus was born the great "news" organs of the press, the telegraphic news agencies, as commercial enterprises.
5. Until then the newspapers had been concerned more with ideological arguments than with "news" proper,

Options :

1. ✓ 2,5,3,1,4
2. ✗ 2,3,4,5,1
3. ✗ 2,1,3,4,5
4. ✗ 2,3,5,4,1

Question Number : 74 Question Id : 7368156540 Question Type : MCQ Option Shuffling : Yes Display Question Number : Yes
Single Line Question Option : No Option Orientation : Vertical

Correct : 1 Wrong : 0.25

Given below is a famous saying, the words of which have been jumbled up and numbered.
Choose the right order from the given options:

when everyone / walks in / else / walks out/ a friend

1 2 3 4 5

Options :

1. ✘ 5,4,3,2,1
2. ✔ 5,2,1,3,4
3. ✘ 5,1,2,3,4
4. ✘ 4,5,3,2,1

Question Number : 74 Question Id : 7368156540 Question Type : MCQ Option Shuffling : Yes Display Question Number : Yes
Single Line Question Option : No Option Orientation : Vertical

Correct : 1 Wrong : 0.25

Given below is a famous saying, the words of which have been jumbled
up and numbered. Choose the right order from the given options:

when everyone / walks in / else / walks out/ a friend

1 2 3 4 5

Options :

1. ✘ 5,4,3,2,1
2. ✔ 5,2,1,3,4
3. ✘ 5,1,2,3,4
4. ✘ 4,5,3,2,1

Question Number : 75 Question Id : 7368156541 Question Type : MCQ Option Shuffling : Yes Display Question Number : Yes
Single Line Question Option : No Option Orientation : Vertical

Correct : 1 Wrong : 0.25

Given below is a famous saying, the words of which have been jumbled up and numbered.
Choose the right order from the given options:

greatness / is / true / the secret / of / simplicity

1 2 3 4 5 6

Options :

1. ✔ 4,5,3,1,2,6
2. ✘ 4,5,6,3,2,1
3. ✘ 4,5,1,3,2,6

4. ✘ 4,5,1,2,6,3

Question Number : 75 Question Id : 7368156541 Question Type : MCQ Option Shuffling : Yes Display Question Number : Yes
Single Line Question Option : No Option Orientation : Vertical

Correct : 1 Wrong : 0.25

Given below is a famous saying, the words of which have been jumbled up and numbered. Choose the right order from the given options:

greatness / is / true / the secret / of / simplicity

1 2 3 4 5 6

Options :

1. ✔ 4,5,3,1,2,6

2. ✘ 4,5,6,3,2,1

3. ✘ 4,5,1,3,2,6

4. ✘ 4,5,1,2,6,3

Question Number : 76 Question Id : 7368156542 Question Type : MCQ Option Shuffling : Yes Display Question Number : Yes
Single Line Question Option : No Option Orientation : Vertical

Correct : 1 Wrong : 0.25

Given below is an ungrammatical, defective, sentence and there are 4 options given. One of them is the correct and improved form of the sentence. Choose the one which improves the given sentence:

The most I know, the more I knew I not know.

Options :

1. ✘ The more I know, the more I knew I don't know.

2. ✘ The most I know, the more I know I don't know.

3. ✔ The more I know, the more I know I don't know.

4. ✘ The more I know, the most I know I don't know.

Question Number : 76 Question Id : 7368156542 Question Type : MCQ Option Shuffling : Yes Display Question Number : Yes
Single Line Question Option : No Option Orientation : Vertical

Correct : 1 Wrong : 0.25

Given below is an ungrammatical, defective, sentence and there are 4 options given. One of them is the correct and improved form of the sentence. Choose the one which improves the given sentence:

The most I know, the more I knew I not know.

Options :

1. ✘ The more I know, the more I knew I don't know.

2. ✘ The most I know

Latest Sarkari Jobs, Govt Exam Results,
Vacancies and updates on one click

Know More

3. ✓ The more I know, the more I know I don't know.
4. ✘ The more I know, the most I know I don't know.

Question Number : 77 Question Id : 7368156543 Question Type : MCQ Option Shuffling : Yes Display Question Number : Yes
Single Line Question Option : No Option Orientation : Vertical

Correct : 1 Wrong : 0.25

Given below is an ungrammatical, defective, sentence and there are 4 options given. One of them is the correct and improved form of the sentence. Choose the one which improves the given sentence:

One good thing over being wrong is joy it brings to others.

Options :

1. ✘ One good thing over being wronged is the joy it brings others.
2. ✓ One good thing about being wrong is the joy it brings others.
3. ✘ One good thing about being wrong is joy it brings to others.
4. ✘ One good thing over being wrong is the joy it brings others.

Question Number : 77 Question Id : 7368156543 Question Type : MCQ Option Shuffling : Yes Display Question Number : Yes
Single Line Question Option : No Option Orientation : Vertical

Correct : 1 Wrong : 0.25

Given below is an ungrammatical, defective, sentence and there are 4 options given. One of them is the correct and improved form of the sentence. Choose the one which improves the given sentence:

One good thing over being wrong is joy it brings to others.

Options :

1. ✘ One good thing over being wronged is the joy it brings others.
2. ✓ One good thing about being wrong is the joy it brings others.
3. ✘ One good thing about being wrong is joy it brings to others.
4. ✘ One good thing over being wrong is the joy it brings others.

Question Number : 78 Question Id : 7368156544 Question Type : MCQ Option Shuffling : Yes Display Question Number : Yes
Single Line Question Option : No Option Orientation : Vertical

Correct : 1 Wrong : 0.25

Given below is an ungrammatical, defective, sentence and there are 4 options given. One of them is the correct and improved form of the sentence. Choose the one which improves the given sentence:

To err is human, to blame its to someone else are more human.

Options :

1. ✘ To err is human, to blame it's on someone else are more human.

2. ✘ To err is human, to blame it on someone else are more human.
3. ✔ To err is human, to blame it on someone else is more human.
4. ✘ To err is human, blame it on someone else is more human.

Question Number : 78 Question Id : 7368156544 Question Type : MCQ Option Shuffling : Yes Display Question Number : Yes
Single Line Question Option : No Option Orientation : Vertical

Correct : 1 Wrong : 0.25

Given below is an ungrammatical, defective, sentence and there are 4 options given. One of them is the correct and improved form of the sentence. Choose the one which improves the given sentence:

To err is human, to blame its to someone else are more human.

Options :

1. ✘ To err is human, to blame it's on someone else are more human.
2. ✘ To err is human, to blame it on someone else are more human.
3. ✔ To err is human, to blame it on someone else is more human.
4. ✘ To err is human, blame it on someone else is more human.

Question Number : 79 Question Id : 7368156545 Question Type : MCQ Option Shuffling : Yes Display Question Number : Yes
Single Line Question Option : No Option Orientation : Vertical

Correct : 1 Wrong : 0.25

Given below is an ungrammatical, defective, sentence and there are 4 options given. One of them is the correct and improved form of the sentence. Choose the one which improves the given sentence:

A conclusion is the final where you getting tired of thinking.

Options :

1. ✘ A conclusion is the final here you got tired thinking.
2. ✔ A conclusion is the place where you got 'tired thinking'.
3. ✘ A conclusion is the place where you got tired of thinking.
4. ✘ A conclusion is the final where you got tired of thinking.

Question Number : 79 Question Id : 7368156545 Question Type : MCQ Option Shuffling : Yes Display Question Number : Yes
Single Line Question Option : No Option Orientation : Vertical

Correct : 1 Wrong : 0.25

Given below is an ungrammatical, defective, sentence and there are 4 options given. One of them is the correct and improved form of the sentence. Choose the one which improves the given sentence:

A conclusion is the

Options :

1. ✘ A conclusion is the final here you got tired thinking.
2. ✔ A conclusion is the place where you got 'tired thinking'.
3. ✘ A conclusion is the place where you got tired of thinking.
4. ✘ A conclusion is the final where you got tired of thinking.

Question Number : 80 Question Id : 7368156546 Question Type : MCQ Option Shuffling : Yes Display Question Number : Yes
Single Line Question Option : No Option Orientation : Vertical

Correct : 1 Wrong : 0.25

Given below is an ungrammatical, defective, sentence and there are 4 options given. One of them is the correct and improved form of the sentence. Choose the one which improves the given sentence:

What will be written without effort is in generally read without pleasure.

Options :

1. ✔ What is written without effort is in general read without pleasure.
2. ✘ What is written without effort was in general read with pleasure.
3. ✘ What is written with effort was in general read without pleasure.
4. ✘ What is written without efforts is in generally read without pleasure.

Question Number : 80 Question Id : 7368156546 Question Type : MCQ Option Shuffling : Yes Display Question Number : Yes
Single Line Question Option : No Option Orientation : Vertical

Correct : 1 Wrong : 0.25

Given below is an ungrammatical, defective, sentence and there are 4 options given. One of them is the correct and improved form of the sentence. Choose the one which improves the given sentence:

What will be written without effort is in generally read without pleasure.

Options :

1. ✔ What is written without effort is in general read without pleasure.
2. ✘ What is written without effort was in general read with pleasure.
3. ✘ What is written with effort was in general read without pleasure.
4. ✘ What is written without efforts is in generally read without pleasure.

Question Number : 81 Question Id : 7368156547 Question Type : MCQ Option Shuffling : Yes Display Question Number : Yes
Single Line Question Option : No Option Orientation : Vertical

Correct : 1 Wrong : 0.25

Given below is a sentence which is to be transformed and rewritten as indicated in brackets and there are four options given. Choose the one which 'correctly' transforms the given sentence :

The invited analyst wasn't being given an easy time by the politicians on the show {into active voice}

Options :

1. ✘ The politicians on the show was giving no easy time to the invited analyst.
2. ✘ The politicians on the show were giving no easy time to the invited analyst.
3. ✘ The politicians on the show didn't give any easy time to the invited analyst.
4. ✔ The politicians on the show weren't giving an easy time to the invited analyst

Question Number : 81 Question Id : 7368156547 Question Type : MCQ Option Shuffling : Yes Display Question Number : Yes
Single Line Question Option : No Option Orientation : Vertical

Correct : 1 Wrong : 0.25

Given below is a sentence which is to be transformed and rewritten as indicated in brackets and there are four options given. Choose the one which 'correctly' transforms the given sentence :

The invited analyst wasn't being given an easy time by the politicians on the show {into active voice}

Options :

1. ✘ The politicians on the show was giving no easy time to the invited analyst.
2. ✘ The politicians on the show were giving no easy time to the invited analyst.
3. ✘ The politicians on the show didn't give any easy time to the invited analyst.
4. ✔ The politicians on the show weren't giving an easy time to the invited analyst

Question Number : 82 Question Id : 7368156548 Question Type : MCQ Option Shuffling : Yes Display Question Number : Yes
Single Line Question Option : No Option Orientation : Vertical

Correct : 1 Wrong : 0.25

Given below is a sentence which is to be transformed and rewritten as indicated in brackets and there are four options given. Choose the one which 'correctly' transforms the given sentence :

"You have to be a college going student to understand our value system." {boy of 18 to his sister who is 14 }

Options :

1. ✓ If you were a college going student, you'd understand our value system.
2. ✗ Had you been a college going student, you would have understood our value system.
3. ✗ If you are a college going student, you will understand our value system.
4. ✗ Only a college going student will understand our value system.

Note: For this question, discrepancy is found in question/answer. Full Marks is being awarded to all candidates.

Question Number : 82 Question Id : 7368156548 Question Type : MCQ Option Shuffling : Yes Display Question Number : Yes
Single Line Question Option : No Option Orientation : Vertical

Correct : 1 Wrong : 0.25

Given below is a sentence which is to be transformed and rewritten as indicated in brackets and there are four options given. Choose the one which 'correctly' transforms the given sentence :

"You have to be a college going student to understand our value system." {boy of 18 to his sister who is 14 --- rewrite as an appropriate conditional sentence}

Options :

1. ✓ If you were a college going student, you'd understand our value system.
Had you been a college going student, you would have understood our value system.
2. ✗ value system.
3. ✗ If you are a college going student, you will understand our value system.
4. ✗ Only a college going student will understand our value system.

Note: For this question, discrepancy is found in question/answer. Full Marks is being awarded to all candidates.

Question Number : 83 Question Id : 7368156549 Question Type : MCQ Option Shuffling : Yes Display Question Number : Yes
Single Line Question Option : No Option Orientation : Vertical

Correct : 1 Wrong : 0.25

Given below is a sentence which is to be transformed and rewritten as indicated in brackets and there are four options given. Choose the one which 'correctly' transforms the given sentence :

"You can meet me tomorrow at the station *near the bookstall.*" {Ask a question which will elicit the italicized phrase as the answer.}

Options :

1. ✗ Where can I meet you tomorrow?
2. ✗ When can I meet you at the station near the bookstall?
3. ✓ Where exactly at the station can I meet you tomorrow?
4. ✗ Whom shall I meet at the station near the bookstall tomorrow?

Correct : 1 Wrong : 0.25

Given below is a sentence which is to be transformed and rewritten as indicated in brackets and there are four options given. Choose the one which 'correctly' transforms the given sentence :

"You can meet me tomorrow at the station *near the bookstall.*" {Ask a question which will elicit the italicized phrase as the answer.}

Options :

1. ✘ Where can I meet you tomorrow?
2. ✘ When can I meet you at the station near the bookstall?
3. ✔ Where exactly at the station can I meet you tomorrow?
4. ✘ Whom shall I meet at the station near the bookstall tomorrow?

Correct : 1 Wrong : 0.25

Read the sentence given below. Pay attention to the words/phrases/segments in *italics*. Choose the appropriate substitutes for the phrases and clauses *italicized*:

My friend *backed me up* over my decision to *give up* my job

Options :

1. ✔ My friend supported my decision to resign my job.
2. ✘ My friend stood behind me when I decided to resign my job.
3. ✘ My friend moved me into a corner over my decision to quit my job.
4. ✘ My friend supported over my decision to resign my job.

Correct : 1 Wrong : 0.25

Read the sentence given below. Pay attention to the words/phrases/segments in *italics*. Choose the appropriate substitutes for the phrases and clauses *italicized*:

My friend *backed me up* over my decision to *give up* my job

Options :

1. ✔ My friend supported my decision to resign my job.
2. ✘ My friend stood behind me when I decided to resign my job.

3. ✘ My friend moved me into a corner over my decision to quit my job.
4. ✘ My friend supported over my decision to resign my job.

Question Number : 85 Question Id : 7368156551 Question Type : MCQ Option Shuffling : Yes Display Question Number : Yes
Single Line Question Option : No Option Orientation : Vertical

Correct : 1 Wrong : 0.25

Read the sentence given below. Pay attention to the words/phrases/segments in *italics*.
Choose the appropriate substitutes for the phrases and clauses *italicized*:

John continued to be in the party as he didn't want *to upset the apple cart*.

Options :

1. ✔ John continued to be in the party as he didn't want to create difficulties.
2. ✘ John continued to be in the party as he didn't want to avoid creating difficulties.
3. ✘ John continued to be in the party as he didn't want to upset the balance of the party.
4. ✘ John continued to be in the party as he didn't want to create obstructions.

Question Number : 85 Question Id : 7368156551 Question Type : MCQ Option Shuffling : Yes Display Question Number : Yes
Single Line Question Option : No Option Orientation : Vertical

Correct : 1 Wrong : 0.25

Read the sentence given below. Pay attention to the
words/phrases/segments in *italics*. Choose the appropriate substitutes for
the phrases and clauses *italicized*.

John continued to be in the party as he didn't want *to upset the apple
cart*.

Options :

1. ✔ John continued to be in the party as he didn't want to create difficulties.
John continued to be in the party as he didn't want to avoid creating
2. ✘ difficulties.
- John continued to be in the party as he didn't want to upset the balance
3. ✘ of the party.
4. ✘ John continued to be in the party as he didn't want to create obstructions.

Question Number : 86 Question Id : 7368156552 Question Type : MCQ Option Shuffling : Yes Display Question Number : Yes
Single Line Question Option : No Option Orientation : Vertical

Correct : 1 Wrong : 0.25

Given below is a sentence which divided into four parts labelled a, b, c, and d. One of
these parts contains an error. Choose the part that has the error:

India / has raced ahead off China / as the world's / fastest-growing economy.

A

B

Latest Sarkari Jobs, Govt Exam Results,
Vacancies and updates on one click

Know More

Options :

1. ✘ A
2. ✔ B
3. ✘ C
4. ✘ D

Question Number : 86 Question Id : 7368156552 Question Type : MCQ Option Shuffling : Yes Display Question Number : Yes
Single Line Question Option : No Option Orientation : Vertical

Correct : 1 Wrong : 0.25

Given below is a sentence which divided into four parts labelled a, b, c, and d. One of these parts contains an error. Choose the part that has the error:

India / has raced ahead off China / as the world's / fastest-growing economy.

A B C D

Options :

1. ✘ A
2. ✔ B
3. ✘ C
4. ✘ D

Question Number : 87 Question Id : 7368156553 Question Type : MCQ Option Shuffling : Yes Display Question Number : Yes
Single Line Question Option : No Option Orientation : Vertical

Correct : 1 Wrong : 0.25

Given below is a sentence which divided into four parts labelled a, b, c, and d. One of these parts contains an error. Choose the part that has the error:

Being in the spotlight onstage,/some writers/feel more comfortable/then others.

A B C D

Options :

1. ✘ A
2. ✘ B
3. ✘ C
4. ✔ D

Question Number : 87 Question Id : 7368156553 Question Type : MCQ Option Shuffling : Yes Display Question Number : Yes
Single Line Question Option : No Option Orientation : Vertical

Correct : 1 Wrong : 0.25

Given below is a sentence which divided into four parts labelled a, b, c, and d. One of these parts contains an error. Choose the part that has the error:

Being in the spotlight onstage,/some writers/feel more comfortable/then others.

A

B

C

D

Options :

1. ✘ A

2. ✘ B

3. ✘ C

4. ✔ D

Question Number : 88 Question Id : 7368156554 Question Type : MCQ Option Shuffling : Yes Display Question Number : Yes
Single Line Question Option : No Option Orientation : Vertical

Correct : 1 Wrong : 0.25

Given below is a sentence which divided into four parts labelled a, b, c, and d. One of these parts contains an error. Choose the part that has the error:

Some legislators / made a case to / "smog tax" to punish / the polluting industries.

A

B

C

D

Options :

1. ✘ A

2. ✔ B

3. ✘ C

4. ✘ D

Question Number : 88 Question Id : 7368156554 Question Type : MCQ Option Shuffling : Yes Display Question Number : Yes
Single Line Question Option : No Option Orientation : Vertical

Correct : 1 Wrong : 0.25

Given below is a sentence which divided into four parts labelled a, b, c, and d. One of these parts contains an error. Choose the part that has the error:

Some legislators / made a case to / "smog tax" to punish / the polluting industries.

A

B

C

D

Options :

1. ✘ A

2. ✔ B

3. ✘ C

4. ✘ D

Question Number : 89 Question Id : 7368156555 Question Type : MCQ Option Shuffling : Yes Display Question Number : Yes
Single Line Question Option : No Option Orientation : Vertical

Correct : 1 Wrong : 0.25

Fill in the blanks with the correct form of idioms /proverbs by choosing the correct option given:

The situation in Yemen fits the idiom 'a fish always rots _____ the head _____.'

Options :

1. ✘ at; first
2. ✔ from; down
3. ✘ near; later
4. ✘ by; down

Question Number : 89 Question Id : 7368156555 Question Type : MCQ Option Shuffling : Yes Display Question Number : Yes
Single Line Question Option : No Option Orientation : Vertical

Correct : 1 Wrong : 0.25

Fill in the blanks with the correct form of idioms /proverbs by choosing the correct option given:

The situation in Yemen fits the idiom 'a fish always rots _____ the head _____.'

Options :

1. ✘ at ; first
2. ✔ from; down
3. ✘ near; later
4. ✘ by; down

Question Number : 90 Question Id : 7368156556 Question Type : MCQ Option Shuffling : Yes Display Question Number : Yes
Single Line Question Option : No Option Orientation : Vertical

Correct : 1 Wrong : 0.25

Fill in the blanks with the correct form of idioms /proverbs by choosing the correct option given:

“Don’t throw the baby _____ the bathwater – check the documents before burning them.”

Options :

1. ✘ off; alongside
2. ✘ out; without
3. ✔ out; with
4. ✘ off; with

Correct : 1 Wrong : 0.25

Fill in the blanks with the correct form of idioms /proverbs by choosing the correct option given:

“Don't throw the baby _____ the bathwater - check the documents before burning them.”

Options :

1. ✘ off; alongside
2. ✘ out; without
3. ✔ out; with
4. ✘ off; with

Question Number : 91 Question Id : 7368156557 Question Type : MCQ Option Shuffling : Yes Display Question Number : Yes
Single Line Question Option : No Option Orientation : Vertical

Correct : 1 Wrong : 0.25

Complete the sentence below by choosing one related pair of words that will fill in the blanks:

Life is not so much a matter of _____ as of _____.

Options :

1. ✘ personality; fashion
2. ✘ talking; speaking
3. ✔ position; disposition
4. ✘ earnings; gifts

Question Number : 91 Question Id : 7368156557 Question Type : MCQ Option Shuffling : Yes Display Question Number : Yes
Single Line Question Option : No Option Orientation : Vertical

Correct : 1 Wrong : 0.25

Complete the sentence below by choosing one related pair of words that will fill in the blanks:

Life is not so much a matter of _____ as of _____.

Options :

1. ✘ personality; fashion
2. ✘ talking; speaking
3. ✔ position; disposition
4. ✘ earnings; gifts

Question Number : 92 Question Id : 7368156558 Question Type : MCQ Option Shuffling : Yes Display Question Number : Yes
Single Line Question Option : No Option Orientation : Vertical

Correct : 1 Wrong : 0.25

Complete the sentence below by choosing one related pair of words that will fill in the blanks:

If you want your _____ to come true, don't _____.

Options :

1. ✘ predictions; move
2. ✘ expectations; fret
3. ✔ dream; oversleep
4. ✘ words; shout

Question Number : 92 Question Id : 7368156558 Question Type : MCQ Option Shuffling : Yes Display Question Number : Yes
Single Line Question Option : No Option Orientation : Vertical

Correct : 1 Wrong : 0.25

Complete the sentence below by choosing one related pair of words that will fill in the blanks:

If you want your _____ to come true, don't _____.

Options :

1. ✘ predictions; move
2. ✘ expectations; fret
3. ✔ dream; oversleep
4. ✘ words; shout

Question Number : 93 Question Id : 7368156559 Question Type : MCQ Option Shuffling : Yes Display Question Number : Yes
Single Line Question Option : No Option Orientation : Vertical

Correct : 1 Wrong : 0.25

A key word is given below. Choose the word closest to it in its meaning {synonym}. Pay attention to how the word would be used to, if required:

Credible

Options :

1. ✔ Believable
2. ✘ Truthful
3. ✘ Honest
4. ✘ Frank

Question Number : 93 Question Id : 7368156559 Question Type : MCQ Option Shuffling : Yes Display Question Number : Yes
Single Line Question Option : No Option Orientation : Vertical

Correct : 1 Wrong : 0.25

A key word is given below. Choose the word closest to it in its meaning {synonym}. Pay attention to how the word would be used to, if required:

Credible

Options :

1. ✓ Believable
2. ✗ Truthful
3. ✗ Honest
4. ✗ Frank

Question Number : 94 Question Id : 7368156560 Question Type : MCQ Option Shuffling : Yes Display Question Number : Yes
Single Line Question Option : No Option Orientation : Vertical

Correct : 1 Wrong : 0.25

A key word is given below. Choose the word closest to it in its meaning {synonym}. Pay attention to how the word would be used to, if required:

Malicious

Options :

1. ✗ Hateful
2. ✓ Evil
3. ✗ Mean
4. ✗ Cruel

Question Number : 94 Question Id : 7368156560 Question Type : MCQ Option Shuffling : Yes Display Question Number : Yes
Single Line Question Option : No Option Orientation : Vertical

Correct : 1 Wrong : 0.25

A key word is given below. Choose the word closest to it in its meaning {synonym}. Pay attention to how the word would be used to, if required:

Malicious

Options :

1. ✗ Hateful
2. ✓ Evil
3. ✗ Mean
4. ✗ Cruel

Question Number : 95 Question Id : 7368156561 Question Type : MCQ Option Shuffling : Yes Display Question Number : Yes
Single Line Question Option : No Option Orientation : Vertical

Correct : 1 Wrong : 0.25

A key word is given below. Choose the word closest to it in its meaning {synonym}. Pay attention to how the word would be used to, if required:

Famished

Options :

1. ✘ Well-known
2. ✔ Starving
3. ✘ Tired
4. ✘ Fasting

Question Number : 95 Question Id : 7368156561 Question Type : MCQ Option Shuffling : Yes Display Question Number : Yes
Single Line Question Option : No Option Orientation : Vertical

Correct : 1 Wrong : 0.25

A key word is given below. Choose the word closest to it in its meaning {synonym}. Pay attention to how the word would be used to, if required:

Famished

Options :

1. ✘ Well-known
2. ✔ Starving
3. ✘ Tired
4. ✘ Fasting

Question Number : 96 Question Id : 7368156562 Question Type : MCQ Option Shuffling : Yes Display Question Number : Yes
Single Line Question Option : No Option Orientation : Vertical

Correct : 1 Wrong : 0.25

A key word is given below. Choose the word which indicates the contradictory or opposite meaning {antonym} of the key word:

Tedious

Options :

1. ✔ Interesting
2. ✘ Motivating
3. ✘ Easy
4. ✘ Light

Question Number : 96 Question Id : 7368156562 Question Type : MCQ Option Shuffling : Yes Display Question Number : Yes
Single Line Question Option : No Option Orientation : Vertical

Correct : 1 Wrong : 0.25

A key word is given below. Choose the word which indicates the contradictory or opposite meaning {antonym} of the key word:

Tedious

Options :

1. ✔ Interesting
2. ✘ Motivating

3. ✘ Easy

4. ✘ Light

Question Number : 97 Question Id : 7368156563 Question Type : MCQ Option Shuffling : Yes Display Question Number : Yes
Single Line Question Option : No Option Orientation : Vertical

Correct : 1 Wrong : 0.25

A key word is given below. Choose the word which indicates the contradictory or opposite meaning {antonym} of the key word:

Attentive

Options :

1. ✔ Distracted

2. ✘ Unfocussed

3. ✘ Unorganized

4. ✘ Confused

Note: For this question, discrepancy is found in question/answer. Full Marks is being awarded to all candidates.

Question Number : 97 Question Id : 7368156563 Question Type : MCQ Option Shuffling : Yes Display Question Number : Yes
Single Line Question Option : No Option Orientation : Vertical

Correct : 1 Wrong : 0.25

A key word is given below. Choose the word which indicates the contradictory or opposite meaning {antonym} of the key word:

Attentive

Options :

1. ✔ Distracted

2. ✘ Unfocussed

3. ✘ Unorganized

4. ✘ Confused

Note: For this question, discrepancy is found in question/answer. Full Marks is being awarded to all candidates.

Question Number : 98 Question Id : 7368156564 Question Type : MCQ Option Shuffling : Yes Display Question Number : Yes
Single Line Question Option : No Option Orientation : Vertical

Correct : 1 Wrong : 0.25

Given below is a set of four words. One of the four words is spelled wrongly. Choose the word that has been spelled wrongly

Options :

1. ✔ dumbell

2. ✘ bluebell

3. ✘ doorbell

4. ✘ snowbell

Question Number : 98 Question
Single Line Question Option : N

Latest Sarkari Jobs, Govt Exam Results,
Vacancies and updates on one click

Know More

lay Question Number : Yes

Correct : 1 Wrong : 0.25

Given below is a set of four words. One of the four words is spelled wrongly. Choose the word that has been spelled wrongly

Options :

1. ✓ dumbell
2. ✗ bluebell
3. ✗ doorbell
4. ✗ snowbell

Question Number : 99 Question Id : 7368156565 Question Type : MCQ Option Shuffling : Yes Display Question Number : Yes
Single Line Question Option : No Option Orientation : Vertical

Correct : 1 Wrong : 0.25

Given below is a set of four words. One of the four words is spelled wrongly. Choose the word that has been spelled wrongly

Options :

1. ✗ Receive
2. ✗ Conceive
3. ✗ Perceive
4. ✓ Recieve

Question Number : 99 Question Id : 7368156565 Question Type : MCQ Option Shuffling : Yes Display Question Number : Yes
Single Line Question Option : No Option Orientation : Vertical

Correct : 1 Wrong : 0.25

Given below is a set of four words. One of the four words is spelled wrongly. Choose the word that has been spelled wrongly

Options :

1. ✗ Receive
2. ✗ Conceive
3. ✗ Perceive
4. ✓ Recieve

Question Number : 100 Question Id : 7368156566 Question Type : MCQ Option Shuffling : Yes Display Question Number : Yes
Single Line Question Option : No Option Orientation : Vertical

Correct : 1 Wrong : 0.25

Given below is a set of four words. Choose the word with the correct spelling:

Options :

1. ✗ Mainors
2. ✓ Miners
3. ✗ Minows
4. ✗ Marons

Question Number : 100 Question
Single Line Question Option : No

Latest Sarkari Jobs, Govt Exam Results,
Vacancies and updates on one click

Know More

Display Question Number : Yes

Correct : 1 Wrong : 0.25

Given below is a set of four words. Choose the word with the correct spelling:

Options :

1. ✘ Mainors
2. ✔ Miners
3. ✘ Minows
4. ✘ Marons

General Intelligence

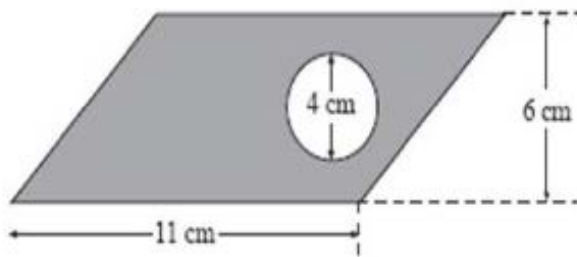
Section Id :	736815129
Section Number :	3
Section type :	Online
Mandatory or Optional:	Mandatory
Number of Questions:	50
Number of Questions to be attempted:	50
Section Marks:	50
Display Number Panel:	Yes
Group All Questions:	No

Sub-Section Number:	1
Sub-Section Id:	736815195
Question Shuffling Allowed :	Yes

Question Number : 101 Question Id : 7368156567 Question Type : MCQ Option Shuffling : Yes Display Question Number : Yes
Single Line Question Option : No Option Orientation : Vertical

Correct : 1 Wrong : 0.25

Find the area of shaded region.



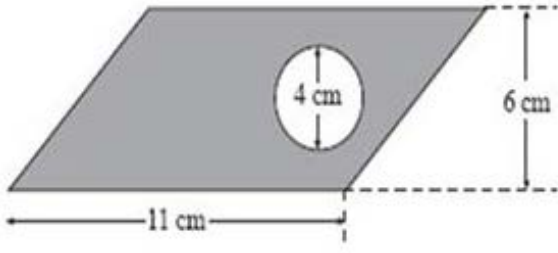
Options :

1. ✘ 19.54 cm²
2. ✘ 17.28 cm²
3. ✘ 32.45 cm²
4. ✔ 53.4 cm²

Question Number : 101 Question Id : 7368156567 Question Type : MCQ Option Shuffling : Yes Display Question Number : Yes
Single Line Question Option : No Option Orientation : Vertical

Correct : 1 Wrong : 0.25

छायांकित क्षेत्र का क्षेत्रफल ज्ञात करें।



Options :

1. ✘ 19.54 वर्ग सें.मी.
2. ✘ 17.28 वर्ग सें.मी.
3. ✘ 32.45 वर्ग सें.मी.
4. ✔ 53.4 वर्ग सें.मी.

Question Number : 102 Question Id : 7368156568 Question Type : MCQ Option Shuffling : Yes Display Question Number : Yes Single Line Question Option : No Option Orientation : Vertical

Correct : 1 Wrong : 0.25

If volume of a spherical ball is 1436.03 cm^3 , what will be the radius of the ball?

Options :

1. ✘ 19.30 cm
2. ✔ 7 cm
3. ✘ 71 cm
4. ✘ 17 cm

Question Number : 102 Question Id : 7368156568 Question Type : MCQ Option Shuffling : Yes Display Question Number : Yes Single Line Question Option : No Option Orientation : Vertical

Correct : 1 Wrong : 0.25

यदि एक गोलाकार गेंद का आयतन 1436.03 घन सें.मी. है, तो गेंद की त्रिज्या कितनी होगी?

Options :

1. ✘ 19.30 सें.मी.
2. ✔ 7 सें.मी.
3. ✘ 71 सें.मी.
4. ✘ 17 सें.मी.

Question Number : 103 Question Id : 7368156569 Question Type : MCQ Option Shuffling : Yes Display Question Number : Yes Single Line Question Option : No Option Orientation : Vertical

Correct : 1 Wrong : 0.25

Statement : Distance MBA programmes should be stopped in any country.

Argument 1: A complete development of one's personality comes only after proper interaction between teachers and students.

Argument 2: The demand for stopping such courses comes from people who are rich.

Options :

1. ✓ Argument 1 is strong
2. ✗ Argument 2 is strong
3. ✗ Both the Arguments are strong
4. ✗ Neither of the Arguments are strong

Question Number : 103 Question Id : 7368156569 Question Type : MCQ Option Shuffling : Yes Display Question Number : Yes Single Line Question Option : No Option Orientation : Vertical

Correct : 1 Wrong : 0.25

कथन : किसी भी देश में दूरस्थ एमबीए शिक्षा को रोका जाना चाहिए।

तर्क 1 : किसी के व्यक्तित्व का संपूर्ण विकास, शिक्षकों और छात्रों के बीच समुचित विचार विमर्श के बाद ही आता है।

तर्क 2: जो लोग अमीर हैं, वे इस तरह के पाठ्यक्रम को रोकने की मांग करते हैं।

Options :

1. ✓ तर्क 1 ठोस है।
2. ✗ तर्क 2 ठोस है।
3. ✗ दोनों तर्क ठोस हैं।
4. ✗ कोई भी तर्क ठोस नहीं है।

Question Number : 104 Question Id : 7368156570 Question Type : MCQ Option Shuffling : Yes Display Question Number : Yes Single Line Question Option : No Option Orientation : Vertical

Correct : 1 Wrong : 0.25

Statement: Should farmers be forced to pay tax ?

Argument 1: That is the only way to pay government.

Argument 2: Maximum percent of our population live in rural areas.

Options :

1. ✗ Argument 1 is strong
2. ✗ Argument 2 is strong
3. ✗ Both the Arguments are strong
4. ✓ Neither of the Arguments are strong

Question Number : 104 Question
Single Line Question Option : N

Latest Sarkari Jobs, Govt Exam Results,
Vacancies and updates on one click

Know More

play Question Number : Yes

Correct : 1 Wrong : 0.25

कथन : क्या किसानों को टैक्स का भुगतान करने के लिए मजबूर किया जाना चाहिए?

तर्क 1 : सरकार को भुगतान करने का यही एक माध्यम है।

तर्क 2 : हमारी जनसंख्या के अधिकतम प्रतिशत लोग ग्रामीण क्षेत्रों में रहते हैं।

Options :

1. ✘ तर्क 1 ठोस है।
2. ✘ तर्क 2 ठोस है।
3. ✘ दोनों तर्क ठोस हैं।
4. ✔ कोई भी तर्क ठोस नहीं है।

Question Number : 105 Question Id : 7368156571 Question Type : MCQ Option Shuffling : Yes Display Question Number : Yes Single Line Question Option : No Option Orientation : Vertical

Correct : 1 Wrong : 0.25

If in a certain language, COTTON is coded as DPUUPO , how is SILK coded in that code?

Options :

1. ✘ TMJL
2. ✔ TJML
3. ✘ TLMJ
4. ✘ LMJT

Question Number : 105 Question Id : 7368156571 Question Type : MCQ Option Shuffling : Yes Display Question Number : Yes Single Line Question Option : No Option Orientation : Vertical

Correct : 1 Wrong : 0.25

यदि एक सांकेतिक भाषा में, COTTON को DPUUPO लिखा जाता है, तो SILK को किस प्रकार से लिखा जायेगा?

Options :

1. ✘ TMJL
2. ✔ TJML
3. ✘ TLMJ
4. ✘ LMJT

Question Number : 106 Question Id : 7368156572 Question Type : MCQ Option Shuffling : Yes Display Question Number : Yes Single Line Question Option : No Option Orientation : Vertical

Correct : 1 Wrong : 0.25

If in a certain language, GIRL is coded as HJSM, how is LADY coded in that code?

Options :

1. ✔ MBEZ
2. ✘ MBZE

3. ✘ MEBZ

4. ✘ MZBE

Question Number : 106 Question Id : 7368156572 Question Type : MCQ Option Shuffling : Yes Display Question Number : Yes
Single Line Question Option : No Option Orientation : Vertical

Correct : 1 Wrong : 0.25

यदि एक सांकेतिक भाषा में, GIRL को HJSM लिखा जाता है, तो LADY को किस प्रकार से लिखा जायेगा?

Options :

1. ✔ MBEZ

2. ✘ MBZE

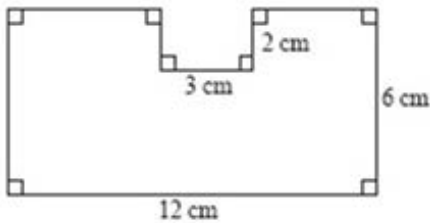
3. ✘ MEBZ

4. ✘ MZBE

Question Number : 107 Question Id : 7368156573 Question Type : MCQ Option Shuffling : Yes Display Question Number : Yes
Single Line Question Option : No Option Orientation : Vertical

Correct : 1 Wrong : 0.25

Calculate the area of the following figure:



Options :

1. ✘ 61 cm²

2. ✘ 62 cm²

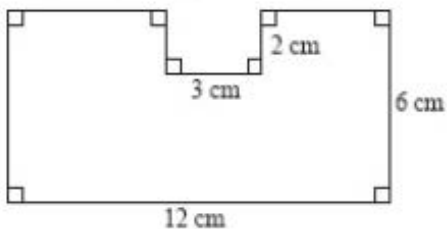
3. ✘ 60 cm²

4. ✔ 66 cm²

Question Number : 107 Question Id : 7368156573 Question Type : MCQ Option Shuffling : Yes Display Question Number : Yes
Single Line Question Option : No Option Orientation : Vertical

Correct : 1 Wrong : 0.25

नीचे दी गई आकृति का क्षेत्रफल ज्ञात करें :



Options :

1. ✘ 61 वर्ग सें.मी.

2. ✘ 62 वर्ग सें.मी.

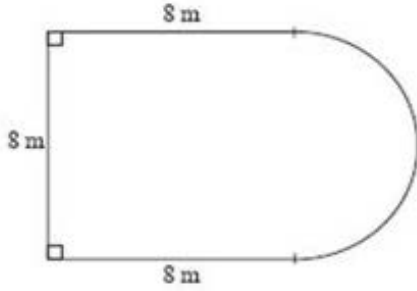
3. ✘ 60 वर्ग सें.मी.

4. ✓ 66 वर्ग सें.मी.

Question Number : 108 Question Id : 7368156574 Question Type : MCQ Option Shuffling : Yes Display Question Number : Yes
Single Line Question Option : No Option Orientation : Vertical

Correct : 1 Wrong : 0.25

Calculate the area of the following figure:



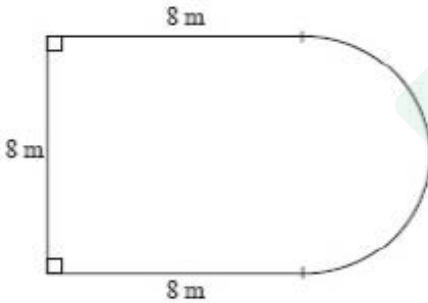
Options :

1. ✗ 57 m²
2. ✗ 67 m²
3. ✗ 74 m²
4. ✓ 89.1 m²

Question Number : 108 Question Id : 7368156574 Question Type : MCQ Option Shuffling : Yes Display Question Number : Yes
Single Line Question Option : No Option Orientation : Vertical

Correct : 1 Wrong : 0.25

नीचे दी गई आकृति का क्षेत्रफल ज्ञात करें :



Options :

1. ✗ 57 वर्ग मी.
2. ✗ 67 वर्ग मी.
3. ✗ 74 वर्ग मी.
4. ✓ 89.1 वर्ग मी.

Question Number : 109 Question Id : 7368156575 Question Type : MCQ Option Shuffling : Yes Display Question Number : Yes
Single Line Question Option : No Option Orientation : Vertical

Correct : 1 Wrong : 0.25

Directions: Given below are three logically true statements given as: Statement I, Statement II, Statement III.

You are also given three more statements given as : Statement 1, Statement 2 and Statement 3. You must determine which of these, if any, is also a logical statement based on the first three logical statements Statement I, Statement II, Statement III.

Statement I: All horses like to run.

Statement II: Some horses like to swim.

Statement III: Some horses look like their masters.

If the first three statements are logically true, which of the following statements must also be logically true?

Statement 1: All horses who like to swim look like their masters.

Statement 2: Horses who like to swim also like to run.

Statement 3: Horses who like to run do not look like their masters.

Options :

1. ✘ Only 1
2. ✔ Only 2
3. ✘ Only 2 and 3
4. ✘ None of the statements is a known fact.

Question Number : 109 Question Id : 7368156575 Question Type : MCQ Option Shuffling : Yes Display Question Number : Yes Single Line Question Option : No Option Orientation : Vertical

Correct : 1 Wrong : 0.25

निर्देश : नीचे दिये हुए I, II, III ये तीन कथन तर्कसंगत हैं।

आपको 1, 2, 3 ऐसे और तीन कथन दिये जायेंगे। कथन I, II, III के आधार पर आपको बताना है कि इन तीनों में से (यदि कोई) कौनसा (से) कथन तर्कसंगत है?

कथन I: सभी घोड़ों को दौड़ना पसंद है।

कथन II: कुछ घोड़ों को तैरना पसंद है।

कथन III: कुछ घोड़े अपने मालिक की तरह दिखते हैं।

यदि पहले तीन कथन तर्कसंगत हैं, तो निम्नलिखित में से कौन से कथन भी तर्कसंगत होने चाहिए?

कथन 1: जिन घोड़ों को तैरना पसंद है, वे सभी अपने मालिक की तरह दिखते हैं।

कथन 2: वे घोड़े जिन्हें तैरना पसंद है, उन्हें दौड़ना भी पसंद है।

कथन 3: जो घोड़े दौड़ना पसंद करते हैं, वे अपने मालिकों की तरह नहीं दिखते हैं।

Options :

1. ✘ केवल 1
2. ✔ केवल 2
3. ✘ केवल 2 और 3

4. ✘ कथनों में से कोई भी एक ज्ञात तथ्य नहीं है।

Question Number : 110 Question Id : 7368156576 Question Type : MCQ Option Shuffling : Yes Display Question Number : Yes
Single Line Question Option : No Option Orientation : Vertical

Correct : 1 Wrong : 0.25

Directions: Given below are three logically true statements given as: Statement I, Statement II, Statement III.

You are also given three more statements given as : Statement 1, Statement 2 and Statement 3. You must determine which of these, if any, is also a logical statement based on the first three logical statements Statement I, Statement II, Statement III.

Statement I: Amrita has four children

Statement II: Two of the children have blue eyes and two of the children have brown eyes.

Statement III: Half of the children are girls.

If the first three statements are logically true, which of the following statements must also be logically true?

Statement 1: At least one girl has blue eyes.

Statement 2: Two of the children are boys.

Statement 3: The boys have brown eyes.

Options :

1. ✘ Only 1
2. ✔ Only 2
3. ✘ Only 2 and 3
4. ✘ None of the statements is a known fact.

Question Number : 110 Question Id : 7368156576 Question Type : MCQ Option Shuffling : Yes Display Question Number : Yes
Single Line Question Option : No Option Orientation : Vertical

Correct : 1 Wrong : 0.25

निर्देश : नीचे दिये हुए I, II, III ये तीन कथन तर्कसंगत हैं।

आपको 1, 2, 3 ऐसे और तीन कथन दिये जायेंगे। कथन I, II, III के आधार पर आपको बताना है कि इन तीनों में से (यदि कोई) कौनसा (से) कथन तर्कसंगत है?

कथन I: अमृता को 4 बच्चे हैं।

कथन II: दो बच्चों की आंखें नीली है और दो बच्चों की भूरी हैं।

कथन III : उनमें से आधी लड़कियां हैं।

यदि पहले तीन कथन तर्कसंगत हैं, तो निम्नलिखित में से कौन से कथन भी तर्कसंगत होने चाहिए?

कथन 1: कम से कम एक लड़की की आंखे नीली हैं।

कथन 2: उन बच्चों में से दो लड़के हैं।

कथन 3 : लड़कों की आंखे भूरी हैं।

Options :

1. ✘ केवल 1
2. ✔ केवल 2

3. ✖ केवल 2 और 3

4. ✖ कथनों में से कोई भी एक ज्ञात तथ्य नहीं है।

Question Number : 111 Question Id : 7368156577 Question Type : MCQ Option Shuffling : Yes Display Question Number : Yes
Single Line Question Option : No Option Orientation : Vertical

Correct : 1 Wrong : 0.25

If bed is called bucket, bucket is called woman, woman is called boy, boy is called burglar and burglar is called butler, who will steal from a house?

Options :

1. ✔ Butler
2. ✖ bucket
3. ✖ bed
4. ✖ Women

Question Number : 111 Question Id : 7368156577 Question Type : MCQ Option Shuffling : Yes Display Question Number : Yes
Single Line Question Option : No Option Orientation : Vertical

Correct : 1 Wrong : 0.25

यदि बिस्तर को बाल्टी, बाल्टी को औरत, औरत को लड़का कहा जाये, लड़के को चोर और चोर को नौकर कहा जाता है, तो घर में चोरी कौन करेगा?

Options :

1. ✔ नौकर
2. ✖ बाल्टी
3. ✖ बिस्तर
4. ✖ औरत

Question Number : 112 Question Id : 7368156578 Question Type : MCQ Option Shuffling : Yes Display Question Number : Yes
Single Line Question Option : No Option Orientation : Vertical

Correct : 1 Wrong : 0.25

If scooty is called helicopter, helicopter is called tractor, tractor is called car, car is called scooter, scooter is called horse, horse is called moped, which flies on air ?

Options :

1. ✖ Scooty
2. ✖ Helicopter
3. ✔ Tractor
4. ✖ Car

Question Number : 112 Question Id : 7368156578 Question Type : MCQ Option Shuffling : Yes Display Question Number : Yes
Single Line Question Option : No Option Orientation : Vertical

Correct : 1 Wrong : 0.25

यदि स्कूटी को हेलीकॉप्टर, हेलीकॉप्टर को ट्रैक्टर, ट्रैक्टर को कार, कार को स्कूटर, स्कूटर को घोड़ा, घोड़े को मोपे

Options :

1. ✘ स्कूटी
2. ✘ हेलीकॉप्टर
3. ✔ ट्रैक्टर
4. ✘ कार

Question Number : 113 Question Id : 7368156579 Question Type : MCQ Option Shuffling : Yes Display Question Number : Yes Single Line Question Option : No Option Orientation : Vertical

Correct : 1 Wrong : 0.25

Imagine you are an employer. What will you look for a candidate who is applying for a job?

Options :

1. ✘ the candidate who comes from the best institute
2. ✔ the one who has the highest qualification.
3. ✘ the candidate who is the most enthusiastic and passionate about the job.
4. ✘ the one who has the highest capability to do the job.

Question Number : 113 Question Id : 7368156579 Question Type : MCQ Option Shuffling : Yes Display Question Number : Yes Single Line Question Option : No Option Orientation : Vertical

Correct : 1 Wrong : 0.25

कल्पना कीजिये कि आप एक नियोक्ता हैं। एक उम्मीदवार जो नौकरी के लिए आवेदन करने आया है, उसमें आप क्या देखेंगे?

Options :

1. ✘ ऐसा उम्मीदवार जो सबसे अच्छी संस्था से आया है।
2. ✔ जिसकी योग्यता सर्वोत्तम है।
3. ✘ जो सबसे ज्यादा उत्साही और नौकरी के बारे में आवेशपूर्ण है।
4. ✘ जिसमें काम करने की सर्वोच्च क्षमता है।

Question Number : 114 Question Id : 7368156580 Question Type : MCQ Option Shuffling : Yes Display Question Number : Yes Single Line Question Option : No Option Orientation : Vertical

Correct : 1 Wrong : 0.25

During a fire, which of the following requires immediate fire rescue operations?

Options :

1. ✘ college
2. ✘ grocery store
3. ✔ hospital
4. ✘ school

Question Number : 114 Question Id : 7368156580 Question Type : MCQ Option Shuffling : Yes Display Question Number : Yes Single Line Question Option : No Option Orientation : Vertical

Correct : 1 Wrong : 0.25

एक आग दुर्घटना के दौरान निम्नलिखित में से कौन सी जगह को तत्काल आग से बचाव कार्य की आवश्यकता है?

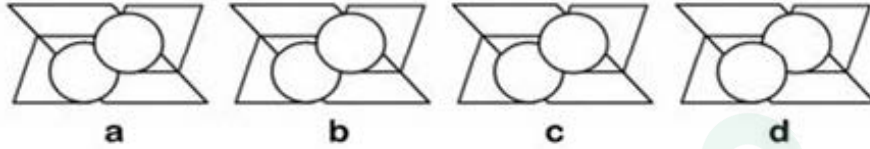
Options :

1. ✘ महाविद्यालय
2. ✘ किराना दुकान
3. ✔ अस्पताल
4. ✘ विद्यालय

Question Number : 115 Question Id : 7368156581 Question Type : MCQ Option Shuffling : Yes Display Question Number : Yes Single Line Question Option : No Option Orientation : Vertical

Correct : 1 Wrong : 0.25

Choose the odd figure.



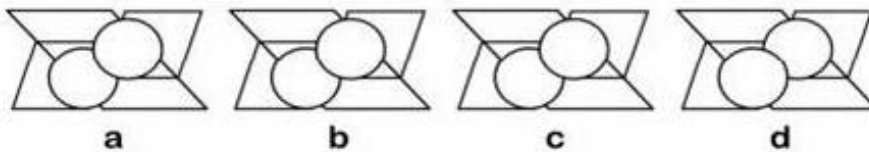
Options :

1. ✘ a
2. ✘ b
3. ✘ c
4. ✔ d

Question Number : 115 Question Id : 7368156581 Question Type : MCQ Option Shuffling : Yes Display Question Number : Yes Single Line Question Option : No Option Orientation : Vertical

Correct : 1 Wrong : 0.25

भिन्न आकृति को पहचानें।



Options :

1. ✘ a
2. ✘ b
3. ✘ c
4. ✔ d

Question Number : 116 Question Id : 7368156582 Question Type : MCQ Option Shuffling : Yes Display Question Number : Yes Single Line Question Option : No Option Orientation : Vertical

Correct : 1 Wrong : 0.25

Choose the odd figure.



Options :

1. ✓ a
2. ✗ b
3. ✗ c
4. ✗ d

Note: For this question, discrepancy is found in question/answer. Full Marks is being awarded to all candidates.

Question Number : 116 Question Id : 7368156582 Question Type : MCQ Option Shuffling : Yes Display Question Number : Yes
Single Line Question Option : No Option Orientation : Vertical

Correct : 1 Wrong : 0.25

भिन्न आकृति को पहचानें।



Options :

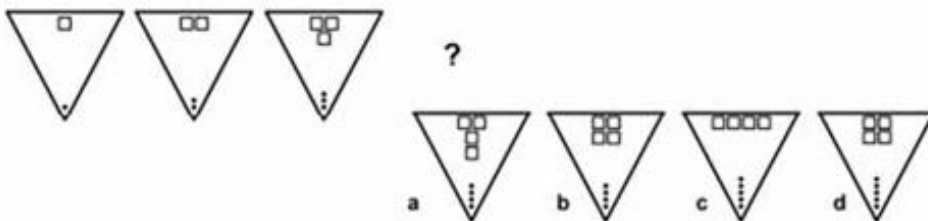
1. ✓ a
2. ✗ b
3. ✗ c
4. ✗ d

Note: For this question, discrepancy is found in question/answer. Full Marks is being awarded to all candidates.

Question Number : 117 Question Id : 7368156583 Question Type : MCQ Option Shuffling : Yes Display Question Number : Yes
Single Line Question Option : No Option Orientation : Vertical

Correct : 1 Wrong : 0.25

Select a figure which from (a)(b)(c) or (d) will come next?



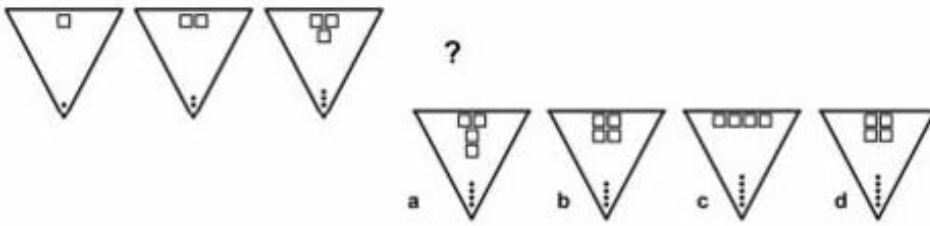
Options :

1. ✗ a
2. ✓ b
3. ✗ c
4. ✗ d

Question Number : 117 Question Id : 7368156583 Question Type : MCQ Option Shuffling : Yes Display Question Number : Yes
 Single Line Question Option : No Option Orientation : Vertical

Correct : 1 Wrong : 0.25

दिये गए श्रेणी में (a)(b)(c) या (d) में से कौन सी आकृति अगले स्थान पर आयेगी?



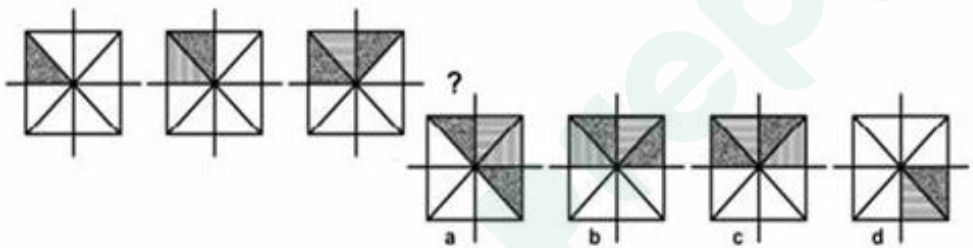
Options :

- 1. ✘ a
- 2. ✔ b
- 3. ✘ c
- 4. ✘ d

Question Number : 118 Question Id : 7368156584 Question Type : MCQ Option Shuffling : Yes Display Question Number : Yes
 Single Line Question Option : No Option Orientation : Vertical

Correct : 1 Wrong : 0.25

Select a figure which from (a)(b)(c) or (d) will come next?



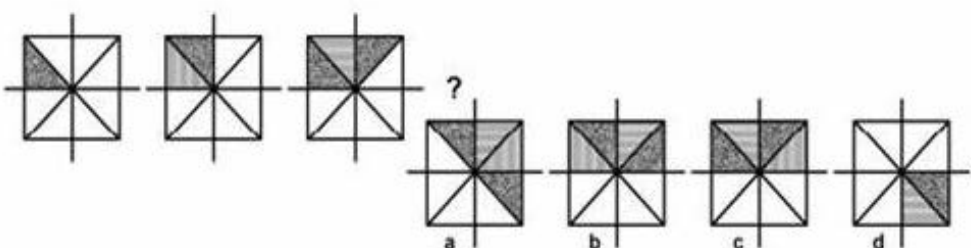
Options :

- 1. ✘ a
- 2. ✔ b
- 3. ✘ c
- 4. ✘ d

Question Number : 118 Question Id : 7368156584 Question Type : MCQ Option Shuffling : Yes Display Question Number : Yes
 Single Line Question Option : No Option Orientation : Vertical

Correct : 1 Wrong : 0.25

दिये गए श्रेणी में (a)(b)(c) या (d) में से कौन सी आकृति अगले स्थान पर आयेगी?



Options :

- 1. ✘ a

2. ✓ b
3. ✗ c
4. ✗ d

Question Number : 119 Question Id : 7368156585 Question Type : MCQ Option Shuffling : Yes Display Question Number : Yes
Single Line Question Option : No Option Orientation : Vertical

Correct : 1 Wrong : 0.25

Choose the correct number from the below given alternatives that will complete the series by replacing the '?'

198, 194, 185, 169, ___ ?

Options :

1. ✗ 147
2. ✗ 145
3. ✓ 144
4. ✗ 148

Question Number : 119 Question Id : 7368156585 Question Type : MCQ Option Shuffling : Yes Display Question Number : Yes
Single Line Question Option : No Option Orientation : Vertical

Correct : 1 Wrong : 0.25

दिये हुए विकल्पों में से सही विकल्प को पहचानें जो नीचे दी हुई श्रेणी में '?' की जगह आकर श्रेणी को पूरा कर सकता है।

198, 194, 185, 169, ___ ?

Options :

1. ✗ 147
2. ✗ 145
3. ✓ 144
4. ✗ 148

Question Number : 120 Question Id : 7368156586 Question Type : MCQ Option Shuffling : Yes Display Question Number : Yes
Single Line Question Option : No Option Orientation : Vertical

Correct : 1 Wrong : 0.25

Choose the correct number from the below given alternatives that will complete the series by replacing the '?'

3, 7, 15, 31, 63, ___ ?

Options :

1. ✓ 127
2. ✗ 125
3. ✗ 215
4. ✗ 313

Question Number : 120 Question Id : 7368156586 Question Type : MCQ Option Shuffling : Yes Display Question Number : Yes
Single Line Question Option : No Option Orientation : Vertical

Correct : 1 Wrong : 0.25

दिये हुए विकल्पों में से सही विकल्प को पहचानें जो नीचे दी हुई श्रेणी में '?' की जगह आकर श्रेणी को पूरा कर सकता है।

3, 7, 15, 31, 63, ___

Options :

1. ✓ 127
2. ✗ 125
3. ✗ 215
4. ✗ 313

Question Number : 121 Question Id : 7368156587 Question Type : MCQ Option Shuffling : Yes Display Question Number : Yes Single Line Question Option : No Option Orientation : Vertical

Correct : 1 Wrong : 0.25

Nancy introduces a man as the son of the brother of her mother. How is the man related to the Nancy?

Options :

1. ✗ Son
2. ✗ Grandson
3. ✓ Cousin
4. ✗ Uncle

Question Number : 121 Question Id : 7368156587 Question Type : MCQ Option Shuffling : Yes Display Question Number : Yes Single Line Question Option : No Option Orientation : Vertical

Correct : 1 Wrong : 0.25

नैन्सी ने एक आदमी का परिचय अपनी माता के भाई के बेटे के रूप में करवाया। उस आदमी का नैन्सी से क्या रिश्ता है?

Options :

1. ✗ बेटा
2. ✗ पोता (Grandson)
3. ✓ चचेरा भाई (Cousin)
4. ✗ चाचा (Uncle)

Question Number : 122 Question Id : 7368156588 Question Type : MCQ Option Shuffling : Yes Display Question Number : Yes Single Line Question Option : No Option Orientation : Vertical

Correct : 1 Wrong : 0.25

If Jenifer says, "Anushka's father Rampal is the only son of my father-in-law Mahesh", then how is Babli, who is the sister of Anushka, related to Mahesh?

Options :

1. ✓ Wife
2. ✗ Daughter
3. ✗ Niece

4. ✘ No Relation

Note: For this question, discrepancy is found in question/answer. Full Marks is being awarded to all candidates.

Question Number : 122 Question Id : 7368156588 Question Type : MCQ Option Shuffling : Yes Display Question Number : Yes Single Line Question Option : No Option Orientation : Vertical

Correct : 1 Wrong : 0.25

यदि जेनिफर कहती है कि, "अनुष्का के पिता रामपाल, मेरे ससुर महेश के इकलौते बेटे हैं।" तो, अनुष्का की बहन बबली का महेश से क्या रिश्ता है?

Options :

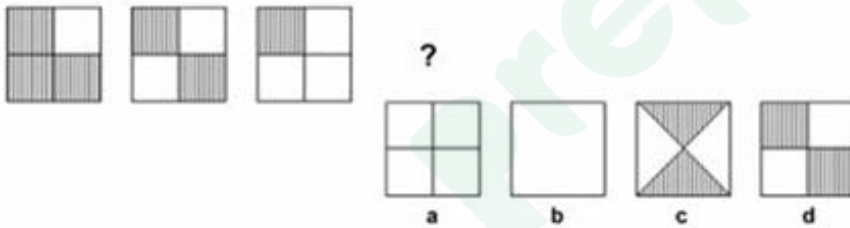
1. ✔ पत्नी
2. ✘ बेटी
3. ✘ भतीजी (Niece)
4. ✘ कोई संबंध नहीं

Note: For this question, discrepancy is found in question/answer. Full Marks is being awarded to all candidates.

Question Number : 123 Question Id : 7368156589 Question Type : MCQ Option Shuffling : Yes Display Question Number : Yes Single Line Question Option : No Option Orientation : Vertical

Correct : 1 Wrong : 0.25

Select a figure which from (a)(b)(c) or (d) will come next?



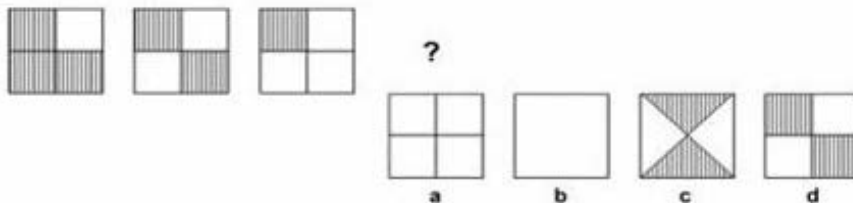
Options :

1. ✔ a
2. ✘ b
3. ✘ c
4. ✘ d

Question Number : 123 Question Id : 7368156589 Question Type : MCQ Option Shuffling : Yes Display Question Number : Yes Single Line Question Option : No Option Orientation : Vertical

Correct : 1 Wrong : 0.25

दिये गए श्रेणी में (a)(b)(c) या (d) में से कौन सी आकृति अगले स्थान पर आयेगी?



Options :

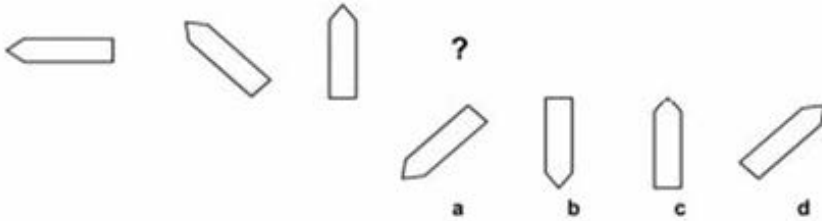
1. ✔ a

- 2. ✘ b
- 3. ✘ c
- 4. ✘ d

Question Number : 124 Question Id : 7368156590 Question Type : MCQ Option Shuffling : Yes Display Question Number : Yes
Single Line Question Option : No Option Orientation : Vertical

Correct : 1 Wrong : 0.25

Select a figure which from (a)(b)(c) or (d) will come next?



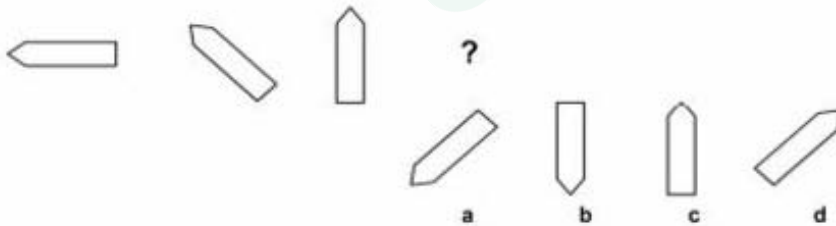
Options :

- 1. ✘ a
- 2. ✘ b
- 3. ✘ c
- 4. ✔ d

Question Number : 124 Question Id : 7368156590 Question Type : MCQ Option Shuffling : Yes Display Question Number : Yes
Single Line Question Option : No Option Orientation : Vertical

Correct : 1 Wrong : 0.25

दिये गए श्रेणी में (a)(b)(c) या (d) में से कौन सी आकृति अगले स्थान पर आयेगी?



Options :

- 1. ✘ a
- 2. ✘ b
- 3. ✘ c
- 4. ✔ d

Question Number : 125 Question Id : 7368156591 Question Type : MCQ Option Shuffling : Yes Display Question Number : Yes
Single Line Question Option : No Option Orientation : Vertical

Correct : 1 Wrong : 0.25

By interchanging any two signs, correct the below equations.

$$3 - 9 \times 27 + 9 \div 3 = 3$$

Options :

- 1. ✘ x and +

2. ✘ x and ÷
3. ✘ - and ÷
4. ✔ x and -

Question Number : 125 Question Id : 7368156591 Question Type : MCQ Option Shuffling : Yes Display Question Number : Yes
Single Line Question Option : No Option Orientation : Vertical

Correct : 1 Wrong : 0.25

नीचे दिये गए समीकरण को सही करने के लिए कौन से दो चिन्हों को आपस में बदलना चाहिए?

$$3 - 9 \times 27 + 9 \div 3 = 3$$

Options :

1. ✘ x और +
2. ✘ x और ÷
3. ✘ - और ÷
4. ✔ x और -

Question Number : 126 Question Id : 7368156592 Question Type : MCQ Option Shuffling : Yes Display Question Number : Yes
Single Line Question Option : No Option Orientation : Vertical

Correct : 1 Wrong : 0.25

By interchanging any two signs, correct the below equations.

$$15 \div 9 \times 3 - 74 + 2 = 5$$

Options :

1. ✘ + and -
2. ✘ ÷ and x
3. ✔ + and ÷
4. ✘ - and ÷

Question Number : 126 Question Id : 7368156592 Question Type : MCQ Option Shuffling : Yes Display Question Number : Yes
Single Line Question Option : No Option Orientation : Vertical

Correct : 1 Wrong : 0.25

नीचे दिये गए समीकरण को सही करने के लिए कौन से दो चिन्हों को आपस में बदलना चाहिए?

$$15 \div 9 \times 3 - 74 + 2 = 5$$

Options :

1. ✘ + और -
2. ✘ ÷ और x
3. ✔ + और ÷
4. ✘ - और ÷

Question Number : 127 Question
Single Line Question Option : No

Latest Sarkari Jobs, Govt Exam Results,
Vacancies and updates on one click

Know More

Display Question Number : Yes

Correct : 1 Wrong : 0.25

Arjun, Bijay, Chris, Dan and Elve are five men sitting in a line facing to south - while Misha, Nisha, Shilpa, Puja and Rosy are five ladies sitting in a second line parallel to the first line and are facing to North.

Bijay who is just next to the left of Dan, is opposite to Rosy.

Chris and Nisha are diagonally opposite to each other.

Elve is opposite to Shilpa who is just next right of Misha.

Puja who is just to the left of Rosy, is opposite to Dan.

Misha is at one end of the line.

Who is sitting third to the right of Shilpa?

Options :

1. ✘ Rosy
2. ✔ Nisha
3. ✘ Misha
4. ✘ Data inadequate

Question Number : 127 Question Id : 7368156593 Question Type : MCQ Option Shuffling : Yes Display Question Number : Yes Single Line Question Option : No Option Orientation : Vertical

Correct : 1 Wrong : 0.25

अर्जुन, विजय, क्रिस, डैन और एल्व ये पांच पुरुष दक्षिण की ओर देखते हुए कतार में बैठे हैं, जबकि मिशा, निशा, शिल्पा, पूजा और रोज़ी ये पांच लड़कियां उत्तर की ओर देखते हुए पहली कतार के समानांतर दूसरी कतार में बैठी हैं।

विजय डैन के ठीक बाएं तरफ है और रोज़ी के सामने बैठा है।

क्रिस और निशा एक दूसरे के तिरछे विपरीत दिशा में बैठे हुए हैं।

एल्व शिल्पा के सामने है जो कि मिशा के ठीक दाएं तरफ है।

पूजा जो रोज़ी के ठीक बाएं तरफ है, वह डैन के सामने बैठी है।

मिशा कतार के किसी एक छोर पर बैठी है।

शिल्पा के दाहिने तरफ तीसरे स्थान पर कौन बैठा है?

Options :

1. ✘ रोज़ी
2. ✔ निशा
3. ✘ मिशा
4. ✘ अपर्याप्त डेटा

Question Number : 128 Question Id : 7368156594 Question Type : MCQ Option Shuffling : Yes Display Question Number : Yes Single Line Question Option : No Option Orientation : Vertical

Correct : 1 Wrong : 0.25

Arjun, Bijay, Chris, Dan and Elve are five men sitting in a line facing to south - while Misha, Nisha, Shilpa, Puja and Rosy are five ladies sitting in a second line parallel to the first line and are facing to North.

Bijay who is just next to the left of Dan, is opposite to Rosy.

Chris and Nisha are diagonally opposite to each other.

Elve is opposite to Shilpa who is just next right of Misha.

Puja who is just to the left of Rosy, is opposite to Dan.

Misha is at one end of the line.

If Bijay shifts to the place of Elve, Elve shifts to the place of Rosy, and Rosy shifts to the place of Bijay, then who will be the second to the left of the person opposite to Shilpa?

Options :

1. ✓ Rosy
2. ✗ Puja
3. ✗ Elve
4. ✗ Dan

Question Number : 128 Question Id : 7368156594 Question Type : MCQ Option Shuffling : Yes Display Question Number : Yes
Single Line Question Option : No Option Orientation : Vertical

Correct : 1 Wrong : 0.25

अर्जुन, विजय, क्रिस, डैन और एल्व ये पांच पुरुष दक्षिण की ओर देखते हुए कतार में बैठे हैं, जबकि मिशा, निशा, शिल्पा, पूजा और रोजी ये पांच लड़कियां उत्तर की ओर देखते हुए पहली कतार के समानांतर दूसरी कतार में बैठी हैं।

विजय डैन के ठीक बाएं तरफ है और रोजी के सामने बैठा है।

क्रिस और निशा एक दूसरे के तिरछे विपरीत दिशा में बैठे हुए हैं।

एल्व शिल्पा के सामने है, जो कि मिशा के ठीक दाएं तरफ है।

पूजा जो रोजी के ठीक बाएं तरफ है, वह डैन के सामने बैठी है।

मिशा कतार के किसी एक छोर पर बैठी है।

यदि विजय एल्व की जगह चला जाता है, एल्व रोजी की जगह चला जाता है, रोजी विजय की जगह चली जाती है, तो शिल्पा के सामने बैठे हुए व्यक्ति के बाएं से दूसरे स्थान पर कौन बैठेगा?

Options :

1. ✓ रोजी
2. ✗ पूजा
3. ✗ एल्व
4. ✗ डैन

Question Number : 129 Question Id : 7368156595 Question Type : MCQ Option Shuffling : Yes Display Question Number : Yes
Single Line Question Option : No Option Orientation : Vertical

Correct : 1 Wrong : 0.25

Arjun, Bijay, Chris, Dan and Elve are five men sitting in a line facing to south - while Misha, Nisha, Shilpa, Puja and Rosy are five ladies sitting in a second line parallel to the first line and are facing to North.

Bijay who is just next to the left of Dan, is opposite to Rosy.

Chris and Nisha are diagonally opposite to each other.

Elve is opposite to Shilpa who is just next right of Misha.

Puja who is just to the left of Rosy, is opposite to Dan.

Misha is at one end of the line.

Which of the following pair is diagonally opposite to each other?

Options :

1. ✘ Elve & Rosy
2. ✘ Bijay & Shilpa
3. ✘ Arjun & Nisha
4. ✔ Arjun & Misha

Question Number : 129 Question Id : 7368156595 Question Type : MCQ Option Shuffling : Yes Display Question Number : Yes
Single Line Question Option : No Option Orientation : Vertical

Correct : 1 Wrong : 0.25

अर्जुन, विजय, क्रिस, डैन और एल्व ये पांच पुरुष दक्षिण की ओर देखते हुए कतार में बैठे हैं, जबकि मिशा, निशा, शिल्पा, पूजा और रोज़ी ये पांच लड़कियां उत्तर की ओर देखते हुए पहली कतार के समानांतर दूसरी कतार में बैठी हैं।

विजय डैन के ठीक बाएं तरफ है और रोज़ी के सामने बैठा है।

क्रिस और निशा एक दूसरे के तिरछे विपरीत दिशा में बैठे हुए हैं।

एल्व शिल्पा के सामने है, जो कि मिशा के ठीक दाएं तरफ है।

पूजा जो रोज़ी के ठीक बाएं तरफ है, वह डैन के सामने बैठी है।

मिशा कतार के किसी एक छोर पर बैठी है।

तो निम्नलिखित में से कौन सी जोड़ी एक दूसरे के तिरछे विपरीत दिशा में बैठी हुई है?

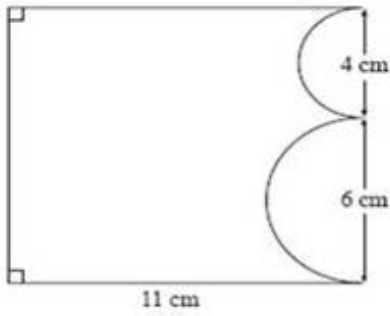
Options :

1. ✘ एल्व और रोज़ी
2. ✘ विजय और शिल्पा
3. ✘ अर्जुन और निशा
4. ✔ अर्जुन और मिशा

Question Number : 130 Question Id : 7368156596 Question Type : MCQ Option Shuffling : Yes Display Question Number : Yes
Single Line Question Option : No Option Orientation : Vertical

Correct : 1 Wrong : 0.25

Calculate the area of the following figure:



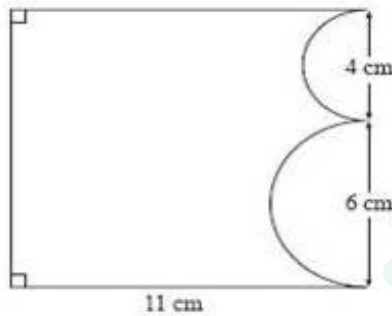
Options :

1. ✘ 61.56cm^2
2. ✘ 54.21cm^2
3. ✘ 44.56cm^2
4. ✔ 89.6cm^2

Question Number : 130 Question Id : 7368156596 Question Type : MCQ Option Shuffling : Yes Display Question Number : Yes
Single Line Question Option : No Option Orientation : Vertical

Correct : 1 Wrong : 0.25

नीचे दी गई आकृति का क्षेत्रफल ज्ञात करें :



Options :

1. ✘ 61.56 वर्ग सें.मी.
2. ✘ 54.21 वर्ग सें.मी.
3. ✘ 44.56 वर्ग सें.मी.
4. ✔ 89.6 वर्ग सें.मी.

Question Number : 131 Question Id : 7368156597 Question Type : MCQ Option Shuffling : Yes Display Question Number : Yes
Single Line Question Option : No Option Orientation : Vertical

Correct : 1 Wrong : 0.25

Which one of following keywords/phrases differ from the others in the given options?

Options :

1. ✘ KP
2. ✘ MN
3. ✔ HR
4. ✘ GT

Question Number : 131 Question Id : 7368156597 Question Type : MCQ Option Shuffling : Yes Display Question Number : Yes
Single Line Question Option : No Option Orientation : Vertical

Correct : 1 Wrong : 0.25

नीचे दिये गए संकेत शब्दों/वाक्यांशों में से कौन सा विकल्प भिन्न है?

Options :

1. ✘ KP
2. ✘ MN
3. ✔ HR
4. ✘ GT

Question Number : 132 Question Id : 7368156598 Question Type : MCQ Option Shuffling : Yes Display Question Number : Yes
Single Line Question Option : No Option Orientation : Vertical

Correct : 1 Wrong : 0.25

Which one of following keywords/phrases differ from the others in the given options?

Options :

1. ✘ AE
2. ✔ AI
3. ✘ IO
4. ✘ EI

Question Number : 132 Question Id : 7368156598 Question Type : MCQ Option Shuffling : Yes Display Question Number : Yes
Single Line Question Option : No Option Orientation : Vertical

Correct : 1 Wrong : 0.25

नीचे दिये गए संकेत शब्दों/वाक्यांशों में से कौन सा विकल्प भिन्न है?

Options :

1. ✘ AE
2. ✔ AI
3. ✘ IO
4. ✘ EI

Question Number : 133 Question Id : 7368156599 Question Type : MCQ Option Shuffling : Yes Display Question Number : Yes
Single Line Question Option : No Option Orientation : Vertical

Correct : 1 Wrong : 0.25

Which one of following keywords/phrases differ from the others in the given options?

Options :

1. ✔ BD
2. ✘ MP
3. ✘ NQ
4. ✘ HK

Question Number : 133 Question Id : 7368156599 Question Type : MCQ Option Shuffling : Yes Display Question Number : Yes
Single Line Question Option : No Option Orientation : Vertical

Correct : 1 Wrong : 0.25

नीचे दिये गए संकेत शब्दों/वाक्यांशों में से कौन सा विकल्प भिन्न है?

Options :

1. ✓ BD
2. ✗ MP
3. ✗ NQ
4. ✗ HK

Question Number : 134 Question Id : 7368156600 Question Type : MCQ Option Shuffling : Yes Display Question Number : Yes Single Line Question Option : No Option Orientation : Vertical

Correct : 1 Wrong : 0.25

Which one of following keywords/phrases differ from the others in the given options?

Options :

1. ✗ XW
2. ✓ FG
3. ✗ ML
4. ✗ PO

Question Number : 134 Question Id : 7368156600 Question Type : MCQ Option Shuffling : Yes Display Question Number : Yes Single Line Question Option : No Option Orientation : Vertical

Correct : 1 Wrong : 0.25

नीचे दिये गए संकेत शब्दों/वाक्यांशों में से कौन सा विकल्प भिन्न है?

Options :

1. ✗ XW
2. ✓ FG
3. ✗ ML
4. ✗ PO

Question Number : 135 Question Id : 7368156601 Question Type : MCQ Option Shuffling : Yes Display Question Number : Yes Single Line Question Option : No Option Orientation : Vertical

Correct : 1 Wrong : 0.25

Choose the correct number from the below given alternatives that will complete the series by replacing the '?'

87, 74, 61, 48, ___ ?

Options :

1. ✗ 37
2. ✗ 44
3. ✓ 35
4. ✗ 55

Question Number : 135 Question Id : 7368156601 Question Type : MCQ Option Shuffling : Yes Display Question Number : Yes Single Line Question Option : No Option Orientation : Vertical

Correct : 1 Wrong : 0.25

दिये हुए विकल्पों में से सही विकल्प को पहचानें जो नीचे दी हुई श्रेणी में '?' की जगह आकर श्रेणी को पूरा कर सकता है।

87, 74, 61, 48, ___ ?

Options :

1. ✘ 37
2. ✘ 44
3. ✔ 35
4. ✘ 55

Question Number : 136 Question Id : 7368156602 Question Type : MCQ Option Shuffling : Yes Display Question Number : Yes Single Line Question Option : No Option Orientation : Vertical

Correct : 1 Wrong : 0.25

Choose the correct number from the below given alternatives that will complete the series by replacing the '?'

25, 75, 35, 70, 45, ___ ?

Options :

1. ✘ 85
2. ✘ 58
3. ✘ 55
4. ✔ 65

Question Number : 136 Question Id : 7368156602 Question Type : MCQ Option Shuffling : Yes Display Question Number : Yes Single Line Question Option : No Option Orientation : Vertical

Correct : 1 Wrong : 0.25

दिये हुए विकल्पों में से सही विकल्प को पहचानें जो नीचे दी हुई श्रेणी में '?' की जगह आकर श्रेणी को पूरा कर सकता है।

25, 75, 35, 70, 45, ___ ?

Options :

1. ✘ 85
2. ✘ 58
3. ✘ 55
4. ✔ 65

Question Number : 137 Question Id : 7368156603 Question Type : MCQ Option Shuffling : Yes Display Question Number : Yes Single Line Question Option : No Option Orientation : Vertical

Correct : 1 Wrong : 0.25

If R is the sister of the son of P's son, how is R related to P?

Options :

1. ✘ Daughter
2. ✘ Sister
3. ✘ Cousin

4. ✓ Granddaughter

Question Number : 137 Question Id : 7368156603 Question Type : MCQ Option Shuffling : Yes Display Question Number : Yes
Single Line Question Option : No Option Orientation : Vertical

Correct : 1 Wrong : 0.25

यदि P के बेटे के बेटे की बहन R है, तो P का R से क्या रिश्ता है?

Options :

1. ✗ बेटी
2. ✗ बहन
3. ✗ चचेरी बहन (Cousin)
4. ✓ पोती (Granddaughter)

Question Number : 138 Question Id : 7368156604 Question Type : MCQ Option Shuffling : Yes Display Question Number : Yes
Single Line Question Option : No Option Orientation : Vertical

Correct : 1 Wrong : 0.25

Pointing to a woman, Nimi said, "Her only brother is the father of my daughter's father".
How is the woman related to Nimi?

Options :

1. ✗ Mother
2. ✗ Grandmother
3. ✓ Aunt
4. ✗ Sister-in-law

Question Number : 138 Question Id : 7368156604 Question Type : MCQ Option Shuffling : Yes Display Question Number : Yes
Single Line Question Option : No Option Orientation : Vertical

Correct : 1 Wrong : 0.25

एक महिला की ओर इशारा करते हुए निमी बोली कि, "उसका इकलौता भाई मेरे बेटे के पिता का पिता है।" उस औरत का निमी से क्या रिश्ता है?

Options :

1. ✗ माता
2. ✗ दादी (Grandmother)
3. ✓ चाची (Aunt)
4. ✗ ननद (Sister-in-law)

Question Number : 139 Question Id : 7368156605 Question Type : MCQ Option Shuffling : Yes Display Question Number : Yes
Single Line Question Option : No Option Orientation : Vertical

Correct : 1 Wrong : 0.25

Calculate the volume of a right circular cone whose radius is 9 cm and height is 17 cm.

Options :

1. ✗ 1677.341cm^3
2. ✗ 2234.89cm^3

3. ✓ 1441.99cm³
4. ✗ 4454.451cm³

Question Number : 139 Question Id : 7368156605 Question Type : MCQ Option Shuffling : Yes Display Question Number : Yes
Single Line Question Option : No Option Orientation : Vertical

Correct : 1 Wrong : 0.25

एक सही परिपत्र शंकु के आयतन की गणना करें, जिसकी त्रिज्या 9 सें.मी. और ऊंचाई 17 सें.मी. है।

Options :

1. ✗ 1677.341 घन सें.मी.
2. ✗ 2234.89 घन सें.मी.
3. ✓ 1441.99 घन सें.मी.
4. ✗ 4454.451 घन सें.मी.

Question Number : 140 Question Id : 7368156606 Question Type : MCQ Option Shuffling : Yes Display Question Number : Yes
Single Line Question Option : No Option Orientation : Vertical

Correct : 1 Wrong : 0.25

Calculate the base area of a right cylinder whose radius is 17 cm.

Options :

1. ✗ 156.04cm²
2. ✗ 256.56cm²
3. ✓ 907.92cm²
4. ✗ 445.56cm²

Question Number : 140 Question Id : 7368156606 Question Type : MCQ Option Shuffling : Yes Display Question Number : Yes
Single Line Question Option : No Option Orientation : Vertical

Correct : 1 Wrong : 0.25

एक सही परिपत्र बेलन के तल क्षेत्रफल की गणना करें, जिसकी त्रिज्या 17 सें.मी. है।

Options :

1. ✗ 156.04 वर्ग सें.मी.
2. ✗ 256.56 वर्ग सें.मी.
3. ✓ 907.92 वर्ग सें.मी.
4. ✗ 445.56 वर्ग सें.मी.

Question Number : 141 Question Id : 7368156607 Question Type : MCQ Option Shuffling : Yes Display Question Number : Yes
Single Line Question Option : No Option Orientation : Vertical

Correct : 1 Wrong : 0.25

By interchanging which two signs from the below given alternatives, correct the below equation:

$$16 + 4 \div 2 - 21 \times 7 = 21$$

Options :

1. ✗ + and -

2. ✘ + and x
3. ✘ - and ÷
4. ✔ x and ÷

Question Number : 141 Question Id : 7368156607 Question Type : MCQ Option Shuffling : Yes Display Question Number : Yes
Single Line Question Option : No Option Orientation : Vertical

Correct : 1 Wrong : 0.25

नीचे दिये गए समीकरण को सही करने के लिए कौन से दो चिन्हों को आपस में बदलना चाहिए?

$$16 + 4 \div 2 - 21 \times 7 = 21$$

Options :

1. ✘ + और -
2. ✘ + और x
3. ✘ - और ÷
4. ✔ x और ÷

Question Number : 142 Question Id : 7368156608 Question Type : MCQ Option Shuffling : Yes Display Question Number : Yes
Single Line Question Option : No Option Orientation : Vertical

Correct : 1 Wrong : 0.25

Calculate the slant height of a right circular cone whose radius is 4cm and height is 8 cm.

Options :

1. ✘ 7.45cm
2. ✔ 8.94cm
3. ✘ 3.44cm
4. ✘ 4.78cm

Question Number : 142 Question Id : 7368156608 Question Type : MCQ Option Shuffling : Yes Display Question Number : Yes
Single Line Question Option : No Option Orientation : Vertical

Correct : 1 Wrong : 0.25

एक सही परिपत्र शंकु के तिर्यक ऊँचाई की गणना करें, जिसकी त्रिज्या 4 से.मी. और ऊँचाई 8 से.मी. है।

Options :

1. ✘ 7.45 से.मी.
2. ✔ 8.94 से.मी.
3. ✘ 3.44 से.मी.
4. ✘ 4.78 से.मी.

Question Number : 143 Question Id : 7368156609 Question Type : MCQ Option Shuffling : Yes Display Question Number : Yes
Single Line Question Option : No Option Orientation : Vertical

Correct : 1 Wrong : 0.25

Choose the correct number from the below given alternatives that will complete the series by replacing the '?'

4, 7, 12, ?, 28, 39

Options :

1. ✓ 19
2. ✗ 24
3. ✗ 14
4. ✗ 16

Question Number : 143 Question Id : 7368156609 Question Type : MCQ Option Shuffling : Yes Display Question Number : Yes Single Line Question Option : No Option Orientation : Vertical

Correct : 1 Wrong : 0.25

दिये हुए विकल्पों में से सही विकल्प को पहचानें जो नीचे दी हुई श्रेणी में '?' की जगह आकर श्रेणी को पूरा कर सकता है।

4, 7, 12, ?, 28, 39

Options :

1. ✓ 19
2. ✗ 24
3. ✗ 14
4. ✗ 16

Question Number : 144 Question Id : 7368156610 Question Type : MCQ Option Shuffling : Yes Display Question Number : Yes Single Line Question Option : No Option Orientation : Vertical

Correct : 1 Wrong : 0.25

Answer the question based on the below information:

Let if '+' means 'x', '-' means '÷', '÷' means '+' and 'x' means '-'

Value of $16 \div 64 - 4 \times 4 + 3 = ?$

Options :

1. ✓ 20
2. ✗ 15.2
3. ✗ 52
4. ✗ 12

Question Number : 144 Question Id : 7368156610 Question Type : MCQ Option Shuffling : Yes Display Question Number : Yes Single Line Question Option : No Option Orientation : Vertical

Correct : 1 Wrong : 0.25

नीचे दी गई जानकारी के आधार पर पूछे गए प्रश्न का उत्तर दें:

मान लें कि यदि '+' का अर्थ 'x', '-' का अर्थ '÷', '÷' का अर्थ '+' और 'x' का अर्थ '-' है,

तो $16 \div 64 - 4 \times 4 + 3 = ?$ का मान कितना होगा?

Options :

1. ✓ 20

2. ✘ 15.2

3. ✘ 52

4. ✘ 12

Question Number : 145 Question Id : 7368156611 Question Type : MCQ Option Shuffling : Yes Display Question Number : Yes
Single Line Question Option : No Option Orientation : Vertical

Correct : 1 Wrong : 0.25

By interchanging any two signs from the below given alternatives, correct the below equation:

$$5 \times 15 \div 7 - 20 + 4 = 77$$

Options :

1. ✘ - and +

2. ✘ x and ÷

3. ✔ + and ÷

4. ✘ + and x

Question Number : 145 Question Id : 7368156611 Question Type : MCQ Option Shuffling : Yes Display Question Number : Yes
Single Line Question Option : No Option Orientation : Vertical

Correct : 1 Wrong : 0.25

नीचे दिये गए समीकरण को सही करने के लिए कौन से दो चिन्हों को आपस में बदलना चाहिए?

$$5 \times 15 \div 7 - 20 + 4 = 77$$

Options :

1. ✘ - और +

2. ✘ x और ÷

3. ✔ + और ÷

4. ✘ + और x

Question Number : 146 Question Id : 7368156612 Question Type : MCQ Option Shuffling : Yes Display Question Number : Yes
Single Line Question Option : No Option Orientation : Vertical

Correct : 1 Wrong : 0.25

Directions: Given below are three logically true statements given as:

Statement I, Statement II, Statement III.

You are also given three more statements given as : Statement 1, Statement 2 and Statement 3. You must determine which of these, if any, is also a logical statement based on the first three logical statements Statement I, Statement II, Statement III.

Statement I: All hats have brims.

Statement II: There are brown hats and red hats.

Statement III: Basketball caps are hats.

If the first three statements are logically true, which of the following statements must also be logically true?

Statement 1: All caps have brims.

Statement 2: Some basketball caps are red.

Statement 3: Basketball caps have no brims.

Options :

1. ✘ Only 1
2. ✘ Only 2
3. ✘ Only 2 and 3
4. ✔ None of the statements is a known fact.

Question Number : 146 Question Id : 7368156612 Question Type : MCQ Option Shuffling : Yes Display Question Number : Yes
Single Line Question Option : No Option Orientation : Vertical

Correct : 1 Wrong : 0.25

निर्देश : नीचे दिये हुए I, II, III ये तीन कथन तर्कसंगत हैं।

आपको 1, 2, 3 ऐसे और तीन कथन दिये जायेंगे। कथन I, II, III के आधार पर आपको बताना है कि इन तीनों में से (यदि कोई) कौनसा (से) कथन तर्कसंगत है?

कथन I : सभी हैट को किनारे होते हैं।

कथन II : वहाँ लाल और भूरे रंग की हैट है।

कथन III : बास्केटबॉल में पहने जाने वाली टोपियों को हैट होती हैं।

यदि पहले तीन कथन तर्कसंगत हैं, तो निम्नलिखित में से कौन से कथन भी तर्कसंगत होने चाहिए?

कथन 1: सभी टोपियों के किनारे होते हैं।

कथन 2: बास्केटबॉल में इस्तेमाल की जाने वाली कुछ टोपियाँ लाल हैं।

कथन 3 : बास्केटबॉल में पहने जाने वाली टोपियों के किनारे नहीं होते हैं।

Options :

1. ✘ केवल 1
2. ✘ केवल 2
3. ✘ केवल 2 और 3
4. ✔ कथनों में से कोई भी एक ज्ञात तथ्य नहीं है।

Question Number : 147 Question Id : 7368156613 Question Type : MCQ Option Shuffling : Yes Display Question Number : Yes
Single Line Question Option : No Option Orientation : Vertical

Correct : 1 Wrong : 0.25

Find the value of Z.

$$Z^2+98712=102467$$

Options :

1. ✓ 61.27
2. ✗ 63
3. ✗ 60.94
4. ✗ 59.99

Question Number : 147 Question Id : 7368156613 Question Type : MCQ Option Shuffling : Yes Display Question Number : Yes
Single Line Question Option : No Option Orientation : Vertical

Correct : 1 Wrong : 0.25

$$Z^2+98712=102467$$

Z का मान ज्ञात करें:

Options :

1. ✓ 61.27
2. ✗ 63
3. ✗ 60.94
4. ✗ 59.99

Question Number : 148 Question Id : 7368156614 Question Type : MCQ Option Shuffling : Yes Display Question Number : Yes
Single Line Question Option : No Option Orientation : Vertical

Correct : 1 Wrong : 0.25

Choose the correct number from the below given alternatives that will complete the series by replacing the '?'

7, 10, 8, 11, 9, 12, ?

Options :

1. ✗ 25
2. ✗ 26
3. ✗ 27
4. ✓ 10

Question Number : 148 Question Id : 7368156614 Question Type : MCQ Option Shuffling : Yes Display Question Number : Yes
Single Line Question Option : No Option Orientation : Vertical

Correct : 1 Wrong : 0.25

दिये हुए विकल्पों में से सही विकल्प को पहचानें जो नीचे दी हुई श्रेणी में '?' की जगह आकर श्रेणी को पूरा कर सकता है।

7, 10, 8, 11, 9, 12, ?

Options :

1. ✗ 25
2. ✗ 26

3. ✘ 27

4. ✔ 10

Question Number : 149 Question Id : 7368156615 Question Type : MCQ Option Shuffling : Yes Display Question Number : Yes
Single Line Question Option : No Option Orientation : Vertical

Correct : 1 Wrong : 0.25

Statement: Strike by college students in India should be completely banned?

Argument 1: College students will learn discipline by this way.

Argument 2: This deprives the students of their rights.

Options :

1. ✘ Argument 1 is strong

2. ✘ Argument 2 is strong

3. ✔ Both the Arguments are strong

4. ✘ Neither of the Arguments are strong

Question Number : 149 Question Id : 7368156615 Question Type : MCQ Option Shuffling : Yes Display Question Number : Yes
Single Line Question Option : No Option Orientation : Vertical

Correct : 1 Wrong : 0.25

कथन : भारत में कॉलेज छात्रों द्वारा की जाने वाली हड़ताल पर क्या पूरी तरह से प्रतिबंध लगा दिया जाना चाहिए?

तर्क 1 : कॉलेज छात्र इस तरीके से अनुशासन सीखेंगे।

तर्क 2 : यह छात्रों को उनके अधिकारों से वंचित रखेगा।

Options :

1. ✘ तर्क 1 ठोस है।

2. ✘ तर्क 2 ठोस है।

3. ✔ दोनों तर्क ठोस हैं।

4. ✘ कोई भी तर्क ठोस नहीं है।

Question Number : 150 Question Id : 7368156616 Question Type : MCQ Option Shuffling : Yes Display Question Number : Yes
Single Line Question Option : No Option Orientation : Vertical

Correct : 1 Wrong : 0.25

If quotient is 6092, divisor is 120 and remainder is 37 then what will be the dividend?

Options :

1. ✘ 145678

2. ✘ 256777

3. ✘ 343947

4. ✔ 731077

Question Number : 150 Question
Single Line Question Option : No

Latest Sarkari Jobs, Govt Exam Results,
Vacancies and updates on one click

Know More

Display Question Number : Yes

Correct : 1 Wrong : 0.25

यदि भागफल 6092, भाजक 120 और शेषफल 37 है; तो भाज्य कितना होगा?

Options :

1. ✘ 145678
2. ✘ 256777
3. ✘ 343947
4. ✔ 731077

General Awareness

Section Id :	736815130
Section Number :	4
Section type :	Online
Mandatory or Optional:	Mandatory
Number of Questions:	50
Number of Questions to be attempted:	50
Section Marks:	50
Display Number Panel:	Yes
Group All Questions:	No

Sub-Section Number:	1
Sub-Section Id:	736815196
Question Shuffling Allowed :	Yes

Question Number : 151 Question Id : 7368156617 Question Type : MCQ Option Shuffling : Yes Display Question Number : Yes
Single Line Question Option : No Option Orientation : Vertical

Correct : 1 Wrong : 0.25

UPSC stands for

Options :

1. ✔ Union Public Service Commission
2. ✘ Union Public Sales Commission
3. ✘ United People's Safety Commission
4. ✘ Union Public Safety Commission

Question Number : 151 Question Id : 7368156617 Question Type : MCQ Option Shuffling : Yes Display Question Number : Yes
Single Line Question Option : No Option Orientation : Vertical

Correct : 1 Wrong : 0.25

यू.पी.एस.सी. का विस्तारित रूप _____ है।

Options :

1. ✔ केंद्रीय लोक सेवा आयोग (यूनियन पब्लिक सर्विस कमीशन)
2. ✘ केंद्रीय लोक विक्रय आयोग (यूनियन पब्लिक सेल्स कमीशन)
3. ✘ संयुक्त लोक सुरक्ष

4. ✘ केंद्रीय लोक सुरक्षा आयोग (यूनियन पब्लिक सेफ्टी कमीशन)

Question Number : 152 Question Id : 7368156618 Question Type : MCQ Option Shuffling : Yes Display Question Number : Yes
Single Line Question Option : No Option Orientation : Vertical

Correct : 1 Wrong : 0.25

Which of the following elections are not conducted by the Election Commission?

Options :

1. ✘ Lok Sabha Elections
2. ✘ Rajya Sabha Elections
3. ✘ Election of the President
4. ✔ Local Bodies Election

Question Number : 152 Question Id : 7368156618 Question Type : MCQ Option Shuffling : Yes Display Question Number : Yes
Single Line Question Option : No Option Orientation : Vertical

Correct : 1 Wrong : 0.25

निर्वाचन आयोग द्वारा निम्नलिखित में से कौन सा चुनाव आयोजित नहीं किया जाता है?

Options :

1. ✘ लोक सभा चुनाव
2. ✘ राज्य सभा चुनाव
3. ✘ राष्ट्रपति का चुनाव
4. ✔ स्थानीय निकायों के चुनाव

Question Number : 153 Question Id : 7368156619 Question Type : MCQ Option Shuffling : Yes Display Question Number : Yes
Single Line Question Option : No Option Orientation : Vertical

Correct : 1 Wrong : 0.25

According to which article of constitution of India, the president of India can be impeached?

Options :

1. ✔ Article 61
2. ✘ Article 256
3. ✘ Article 77
4. ✘ Article 89

Question Number : 153 Question Id : 7368156619 Question Type : MCQ Option Shuffling : Yes Display Question Number : Yes
Single Line Question Option : No Option Orientation : Vertical

Correct : 1 Wrong : 0.25

भारतीय संविधान के कौन से अनुच्छेद के अनुसार भारत के राष्ट्रपति पर महाभियोग चलाया जा सकता है?

Options :

1. ✔ अनुच्छेद 61

2. ✘ अनुच्छेद 256

3. ✘ अनुच्छेद 77

4. ✘ अनुच्छेद 89

Question Number : 154 Question Id : 7368156620 Question Type : MCQ Option Shuffling : Yes Display Question Number : Yes
Single Line Question Option : No Option Orientation : Vertical

Correct : 1 Wrong : 0.25

The concept of Federal system and residual powers of Indian constitution is borrowed from which of the following countries?

Options :

1. ✘ United kingdom

2. ✘ Germany

3. ✘ Russia

4. ✔ Canada

Question Number : 154 Question Id : 7368156620 Question Type : MCQ Option Shuffling : Yes Display Question Number : Yes
Single Line Question Option : No Option Orientation : Vertical

Correct : 1 Wrong : 0.25

भारतीय संविधान की संघीय प्रणाली तथा शेष शक्तियों की संकल्पना निम्नलिखित में से कौन से देश से ली गई है?

Options :

1. ✘ यूनाइटेड किंगडम

2. ✘ जर्मनी

3. ✘ रूस

4. ✔ कनाडा

Question Number : 155 Question Id : 7368156621 Question Type : MCQ Option Shuffling : Yes Display Question Number : Yes
Single Line Question Option : No Option Orientation : Vertical

Correct : 1 Wrong : 0.25

Which article of Indian constitution is about the establishment of Village Panchayats?

Options :

1. ✘ Article 50

2. ✔ Article 40

3. ✘ Article 24

4. ✘ Article 48

Question Number : 155 Question Id : 7368156621 Question Type : MCQ Option Shuffling : Yes Display Question Number : Yes
Single Line Question Option : No Option Orientation : Vertical

Correct : 1 Wrong : 0.25

भारतीय संविधान का कौन सा अनुच्छेद ग्राम पंचायत की स्थापना के संबंधित है?

Options :

Latest Sarkari Jobs, Govt Exam Results,
Vacancies and updates on one click

Know More

1. ✘ अनुच्छेद 50
2. ✔ अनुच्छेद 40
3. ✘ अनुच्छेद 24
4. ✘ अनुच्छेद 48

Question Number : 156 Question Id : 7368156622 Question Type : MCQ Option Shuffling : Yes Display Question Number : Yes
Single Line Question Option : No Option Orientation : Vertical

Correct : 1 Wrong : 0.25

'Konark Samman' award is given in which of the following states?

Options :

1. ✘ Madhya Pradesh
2. ✘ Karnataka
3. ✔ Odisha
4. ✘ Uttar Pradesh

Question Number : 156 Question Id : 7368156622 Question Type : MCQ Option Shuffling : Yes Display Question Number : Yes
Single Line Question Option : No Option Orientation : Vertical

Correct : 1 Wrong : 0.25

'कोणार्क सम्मान' पुरस्कार, निम्नलिखित में से कौन से राज्य द्वारा दिया जाता है?

Options :

1. ✘ मध्य प्रदेश
2. ✘ कर्नाटक
3. ✔ उड़ीसा
4. ✘ उत्तर प्रदेश

Question Number : 157 Question Id : 7368156623 Question Type : MCQ Option Shuffling : Yes Display Question Number : Yes
Single Line Question Option : No Option Orientation : Vertical

Correct : 1 Wrong : 0.25

Which one of the following awards given by the Indian Government is for distinguished writings in 24 Indian languages?

Options :

1. ✘ Dhyanchand Award
2. ✔ Sahitya Academy Award
3. ✘ Dada Saheb Phalke Award
4. ✘ Nandi Award

Question Number : 157 Question Id : 7368156623 Question Type : MCQ Option Shuffling : Yes Display Question Number : Yes
Single Line Question Option : No Option Orientation : Vertical

Correct : 1 Wrong : 0.25

24 भारतीय भाषाओं में विख्यात लेखन के लिए भारत सरकार द्वारा दिया जाने वाला पुरस्कार निम्नलिखित में से कौन सा है?

Options :

1. ✘ ध्यानचंद पुरस्कार
2. ✔ साहित्य अकादमी पुरस्कार
3. ✘ दादा साहेब फाल्के पुरस्कार
4. ✘ नंदी पुरस्कार

Question Number : 158 Question Id : 7368156624 Question Type : MCQ Option Shuffling : Yes Display Question Number : Yes
Single Line Question Option : No Option Orientation : Vertical

Correct : 1 Wrong : 0.25

Which one of the following is a peace time Gallantry Award?

Options :

1. ✔ Ashoka Chakra
2. ✘ Param Vir Chakra
3. ✘ Mahavir Chakra
4. ✘ Vir Chakra

Question Number : 158 Question Id : 7368156624 Question Type : MCQ Option Shuffling : Yes Display Question Number : Yes
Single Line Question Option : No Option Orientation : Vertical

Correct : 1 Wrong : 0.25

निम्नलिखित में से कौन सा एक शांति काल वीरता (peace time Gallantry) पुरस्कार है?

Options :

1. ✔ अशोक चक्र
2. ✘ परमवीर चक्र
3. ✘ महावीर चक्र
4. ✘ वीर चक्र

Question Number : 159 Question Id : 7368156625 Question Type : MCQ Option Shuffling : Yes Display Question Number : Yes
Single Line Question Option : No Option Orientation : Vertical

Correct : 1 Wrong : 0.25

Which of the following is not an award related to Literature?

Options :

1. ✘ Jnanpith Award
2. ✘ Man Booker Prize
3. ✘ Pulitzer Prize
4. ✔ Dhronacharya Award

Question Number : 159 Question Id : 7368156625 Question Type : MCQ Option Shuffling : Yes Display Question Number : Yes
Single Line Question Option : No Option Orientation : Vertical

Correct : 1 Wrong : 0.25

निम्नलिखित में से कौन सा साहित्य से संबंधित पुरस्कार नहीं है?

Options :

1. ✘ जानपीठ पुरस्कार
2. ✘ मैन बुकर पुरस्कार
3. ✘ पुलित्जर पुरस्कार
4. ✔ द्रोणाचार्य पुरस्कार

Question Number : 160 Question Id : 7368156626 Question Type : MCQ Option Shuffling : Yes Display Question Number : Yes
Single Line Question Option : No Option Orientation : Vertical

Correct : 1 Wrong : 0.25

Which Indian award of movies is considered equivalent to American Academy Award?

Options :

1. ✘ N.T.R. Award
2. ✘ Dadasaheb Phalke Award
3. ✘ Filmfare Award
4. ✔ National Film Award

Question Number : 160 Question Id : 7368156626 Question Type : MCQ Option Shuffling : Yes Display Question Number : Yes
Single Line Question Option : No Option Orientation : Vertical

Correct : 1 Wrong : 0.25

फिल्मों से संबंधित किस भारतीय पुरस्कार को 'अमेरिकी अकादमी' पुरस्कार के समतुल्य माना जाता है?

Options :

1. ✘ एन.टी.आर. पुरस्कार
2. ✘ दादा साहेब फाल्के पुरस्कार
3. ✘ फिल्मफेयर पुरस्कार
4. ✔ राष्ट्रीय फिल्म पुरस्कार

Question Number : 161 Question Id : 7368156627 Question Type : MCQ Option Shuffling : Yes Display Question Number : Yes
Single Line Question Option : No Option Orientation : Vertical

Correct : 1 Wrong : 0.25

Which Indian poetess is known as 'Modern Meera'?

Options :

1. ✔ Mahadevi Varma
2. ✘ Sarojini Naidu

3. ✖ Shakuntala Devi

4. ✖ Molla

Question Number : 161 Question Id : 7368156627 Question Type : MCQ Option Shuffling : Yes Display Question Number : Yes
Single Line Question Option : No Option Orientation : Vertical

Correct : 1 Wrong : 0.25

किस भारतीय कवयित्री को 'आधुनिक मीरा' कहा जाता है?

Options :

1. ✔ महादेवी वर्मा

2. ✖ सरोजिनी नायडू

3. ✖ शकुंतला देवी

4. ✖ मोल्ला

Question Number : 162 Question Id : 7368156628 Question Type : MCQ Option Shuffling : Yes Display Question Number : Yes
Single Line Question Option : No Option Orientation : Vertical

Correct : 1 Wrong : 0.25

The movie 'Jurassic' Park' is based on Novel written by

Options :

1. ✖ Fred Quimby

2. ✔ Michael Crichton

3. ✖ John Falkland

4. ✖ David Hoffman

Question Number : 162 Question Id : 7368156628 Question Type : MCQ Option Shuffling : Yes Display Question Number : Yes
Single Line Question Option : No Option Orientation : Vertical

Correct : 1 Wrong : 0.25

'जुरासिक पार्क' नामक फिल्म किसके द्वारा लिखे हुए उपन्यास पर आधारित है?

Options :

1. ✖ फ्रेड क्विम्बी

2. ✔ माइकल क्रिकटन

3. ✖ जॉन फाकलैण्ड

4. ✖ डेविड हॉफमैन

Question Number : 163 Question Id : 7368156629 Question Type : MCQ Option Shuffling : Yes Display Question Number : Yes
Single Line Question Option : No Option Orientation : Vertical

Correct : 1 Wrong : 0.25

The Pulitzer prize winning book 'The Namesake' is written by

Options :

1. ✖ Rohinton Mistry

2. ✖ Amitav Ghosh

Latest Sarkari Jobs, Govt Exam Results,
Vacancies and updates on one click

Know More

3. ✘ Vikram Seth
4. ✔ Jhumpa Lahiri

Question Number : 163 Question Id : 7368156629 Question Type : MCQ Option Shuffling : Yes Display Question Number : Yes
Single Line Question Option : No Option Orientation : Vertical

Correct : 1 Wrong : 0.25

पुलित्जर पुरस्कार जीतने वाली 'दि नेमसेक' नामक पुस्तक किसके द्वारा लिखी गई है?

Options :

1. ✘ रोहिंटन मिस्त्री
2. ✘ अमिताव घोष
3. ✘ विक्रम सेठ
4. ✔ झुंपा लाहिड़ी

Question Number : 164 Question Id : 7368156630 Question Type : MCQ Option Shuffling : Yes Display Question Number : Yes
Single Line Question Option : No Option Orientation : Vertical

Correct : 1 Wrong : 0.25

The book 'Memories of Welfare State' is written by

Options :

1. ✘ V.S.Naipaul
2. ✘ Kiran Desai
3. ✔ Upamanyu Chatterjee
4. ✘ Arundhati Roy

Question Number : 164 Question Id : 7368156630 Question Type : MCQ Option Shuffling : Yes Display Question Number : Yes
Single Line Question Option : No Option Orientation : Vertical

Correct : 1 Wrong : 0.25

'मेमोरीज ऑफ वेलफेयर स्टेट' नामक पुस्तक किसने लिखी है?

Options :

1. ✘ वी. एस. नायपॉल
2. ✘ किरण देसाई
3. ✔ उपमन्यू चटर्जी
4. ✘ अरुंधती रॉय

Question Number : 165 Question Id : 7368156631 Question Type : MCQ Option Shuffling : Yes Display Question Number : Yes
Single Line Question Option : No Option Orientation : Vertical

Correct : 1 Wrong : 0.25

For which writing of Salman Rushdie, booker prize was awarded?

Options :

1. ✘ Fury

2. ✓ Midnight Children
3. ✗ Shame
4. ✗ The Moor's Last Sigh

Question Number : 165 Question Id : 7368156631 Question Type : MCQ Option Shuffling : Yes Display Question Number : Yes
Single Line Question Option : No Option Orientation : Vertical

Correct : 1 Wrong : 0.25

सलमान रुश्दी की कौन सी पुस्तक के लिए बुकर पुरस्कार दिया गया था?

Options :

1. ✗ फ्यूरी
2. ✓ मिडनाइट चिल्ड्रेन
3. ✗ शेम
4. ✗ दि मूर्स लास्ट साइ

Question Number : 166 Question Id : 7368156632 Question Type : MCQ Option Shuffling : Yes Display Question Number : Yes
Single Line Question Option : No Option Orientation : Vertical

Correct : 1 Wrong : 0.25

Dachigam Sanctuary is located in

Options :

1. ✗ Gujarat
2. ✗ Uttarakhand
3. ✓ Jammu & Kashmir
4. ✗ Madhya Pradesh

Question Number : 166 Question Id : 7368156632 Question Type : MCQ Option Shuffling : Yes Display Question Number : Yes
Single Line Question Option : No Option Orientation : Vertical

Correct : 1 Wrong : 0.25

दाचीगाम अभयारण्य _____ में स्थित है।

Options :

1. ✗ गुजरात
2. ✗ उत्तराखंड
3. ✓ जम्मू और कश्मीर
4. ✗ मध्य प्रदेश

Question Number : 167 Question Id : 7368156633 Question Type : MCQ Option Shuffling : Yes Display Question Number : Yes
Single Line Question Option : No Option Orientation : Vertical

Correct : 1 Wrong : 0.25

The national game of India is

Options :

1. ✗ Cricket

2. ✓ Hockey
3. ✗ Kabaddi
4. ✗ Foot ball

Question Number : 167 Question Id : 7368156633 Question Type : MCQ Option Shuffling : Yes Display Question Number : Yes
Single Line Question Option : No Option Orientation : Vertical

Correct : 1 Wrong : 0.25

भारत का राष्ट्रीय खेल कौन सा है?

Options :

1. ✗ क्रिकेट
2. ✓ हॉकी
3. ✗ कबड्डी
4. ✗ फुटबॉल

Question Number : 168 Question Id : 7368156634 Question Type : MCQ Option Shuffling : Yes Display Question Number : Yes
Single Line Question Option : No Option Orientation : Vertical

Correct : 1 Wrong : 0.25

The famous Howrah bridge is located in

Options :

1. ✓ Kolkata
2. ✗ Mumbai
3. ✗ Jaipur
4. ✗ Jodhpur

Question Number : 168 Question Id : 7368156634 Question Type : MCQ Option Shuffling : Yes Display Question Number : Yes
Single Line Question Option : No Option Orientation : Vertical

Correct : 1 Wrong : 0.25

प्रसिद्ध 'हॉवड़ा पुल' _____ में स्थित है।

Options :

1. ✓ कोलकाता
2. ✗ मुंबई
3. ✗ जयपुर
4. ✗ जोधपुर

Question Number : 169 Question Id : 7368156635 Question Type : MCQ Option Shuffling : Yes Display Question Number : Yes
Single Line Question Option : No Option Orientation : Vertical

Correct : 1 Wrong : 0.25

Ajanta Caves are located in

Options :

1. ✗ Kerala

2. ✘ Karnataka
3. ✘ Gujarat
4. ✔ Maharashtra

Question Number : 169 Question Id : 7368156635 Question Type : MCQ Option Shuffling : Yes Display Question Number : Yes
Single Line Question Option : No Option Orientation : Vertical

Correct : 1 Wrong : 0.25

अजंता गुफाएँ _____ में स्थित हैं।

Options :

1. ✘ केरल
2. ✘ कर्नाटक
3. ✘ गुजरात
4. ✔ महाराष्ट्र

Question Number : 170 Question Id : 7368156636 Question Type : MCQ Option Shuffling : Yes Display Question Number : Yes
Single Line Question Option : No Option Orientation : Vertical

Correct : 1 Wrong : 0.25

With which art form is Yamini Krishnamurthy associated?

Options :

1. ✔ Bharatanatyam
2. ✘ Painting
3. ✘ Craft work
4. ✘ Singing

Question Number : 170 Question Id : 7368156636 Question Type : MCQ Option Shuffling : Yes Display Question Number : Yes
Single Line Question Option : No Option Orientation : Vertical

Correct : 1 Wrong : 0.25

यामिनी कृष्णमूर्ति कौन सी कला से संबंधित है?

Options :

1. ✔ भरतनाट्यम
2. ✘ चित्रकला
3. ✘ शिल्प कार्य
4. ✘ गायन

Question Number : 171 Question Id : 7368156637 Question Type : MCQ Option Shuffling : Yes Display Question Number : Yes
Single Line Question Option : No Option Orientation : Vertical

Correct : 1 Wrong : 0.25

Who occupies the second highest office in India?

Options :

1. ✘ President
2. ✘ Prime Minister

3. ✓ Vice-president

4. ✗ Chief Justice

Question Number : 171 Question Id : 7368156637 Question Type : MCQ Option Shuffling : Yes Display Question Number : Yes
Single Line Question Option : No Option Orientation : Vertical

Correct : 1 Wrong : 0.25

भारत में द्वितीय सर्वोच्च पद कौन सा है?

Options :

1. ✗ राष्ट्रपति

2. ✗ प्रधानमंत्री

3. ✓ उप-राष्ट्रपति

4. ✗ मुख्य न्यायाधीश

Question Number : 172 Question Id : 7368156638 Question Type : MCQ Option Shuffling : Yes Display Question Number : Yes
Single Line Question Option : No Option Orientation : Vertical

Correct : 1 Wrong : 0.25

How many members of Lok Sabha are represented from Union Territories?

Options :

1. ✓ 20

2. ✗ 40

3. ✗ 30

4. ✗ 10

Question Number : 172 Question Id : 7368156638 Question Type : MCQ Option Shuffling : Yes Display Question Number : Yes
Single Line Question Option : No Option Orientation : Vertical

Correct : 1 Wrong : 0.25

केन्द्र शासित प्रदेशों से लोकसभा में कितने सदस्य आते हैं?

Options :

1. ✓ 20

2. ✗ 40

3. ✗ 30

4. ✗ 10

Question Number : 173 Question Id : 7368156639 Question Type : MCQ Option Shuffling : Yes Display Question Number : Yes
Single Line Question Option : No Option Orientation : Vertical

Correct : 1 Wrong : 0.25

Which of the following states has the Bicameral Legislature?

Options :

1. ✗ Goa

2. ✗ Kerala

3. ✗ Tamil Nadu

4. ✓ Uttar Pradesh

Question Number : 173 Question Id : 7368156639 Question Type : MCQ Option Shuffling : Yes Display Question Number : Yes
Single Line Question Option : No Option Orientation : Vertical

Correct : 1 Wrong : 0.25

निम्नलिखित में से कौन से राज्य में द्विसदनीय विधानमंडल है?

Options :

1. ✗ गोवा
2. ✗ केरल
3. ✗ तमिलनाडु
4. ✓ उत्तर प्रदेश

Question Number : 174 Question Id : 7368156640 Question Type : MCQ Option Shuffling : Yes Display Question Number : Yes
Single Line Question Option : No Option Orientation : Vertical

Correct : 1 Wrong : 0.25

Who administers the state under President's rule?

Options :

1. ✗ High Court Judge
2. ✓ Governor
3. ✗ Chief Justice
4. ✗ Prime Minister

Question Number : 174 Question Id : 7368156640 Question Type : MCQ Option Shuffling : Yes Display Question Number : Yes
Single Line Question Option : No Option Orientation : Vertical

Correct : 1 Wrong : 0.25

राष्ट्रपति शासन के तहत राज्य का प्रशासन कौन संभालता है?

Options :

1. ✗ उच्च न्यायालय के न्यायमूर्ति
2. ✓ राज्यपाल
3. ✗ मुख्य न्यायाधीश
4. ✗ प्रधानमंत्री

Question Number : 175 Question Id : 7368156641 Question Type : MCQ Option Shuffling : Yes Display Question Number : Yes
Single Line Question Option : No Option Orientation : Vertical

Correct : 1 Wrong : 0.25

Chandigarh is administered by

Options :

1. ✓ Lieutenant Governor
2. ✗ Chief Commissioner
3. ✗ Chief Minister of Punjab

4. ✘ Governor of Haryana

Note: For this question, discrepancy is found in question/answer. Full Marks is being awarded to all candidates.

Question Number : 175 Question Id : 7368156641 Question Type : MCQ Option Shuffling : Yes Display Question Number : Yes
Single Line Question Option : No Option Orientation : Vertical

Correct : 1 Wrong : 0.25

चंडीगढ़ को कौन प्रशासित करता है?

Options :

1. ✔ उपराज्यपाल
2. ✘ मुख्य आयुक्त
3. ✘ पंजाब के मुख्यमंत्री
4. ✘ हरियाणा के राज्यपाल

Note: For this question, discrepancy is found in question/answer. Full Marks is being awarded to all candidates.

Question Number : 176 Question Id : 7368156642 Question Type : MCQ Option Shuffling : Yes Display Question Number : Yes
Single Line Question Option : No Option Orientation : Vertical

Correct : 1 Wrong : 0.25

The Attorney General of India is appointed by

Options :

1. ✔ President
2. ✘ Prime Minister
3. ✘ Chief Justice
4. ✘ Vice-President

Question Number : 176 Question Id : 7368156642 Question Type : MCQ Option Shuffling : Yes Display Question Number : Yes
Single Line Question Option : No Option Orientation : Vertical

Correct : 1 Wrong : 0.25

भारत के महान्यायवादी की नियुक्ति कौन करता है?

Options :

1. ✔ राष्ट्रपति
2. ✘ प्रधानमंत्री
3. ✘ मुख्य न्यायाधीश
4. ✘ उप-राष्ट्रपति

Question Number : 177 Question Id : 7368156643 Question Type : MCQ Option Shuffling : Yes Display Question Number : Yes
Single Line Question Option : No Option Orientation : Vertical

Correct : 1 Wrong : 0.25

Who is the present Union Minister of External Affairs?

Options :

1. ✘ Manohar Parrikar
2. ✔ Sushma Swaraj

3. ✘ Smriti Irani
4. ✘ Bandaru Dattatreya

Question Number : 177 Question Id : 7368156643 Question Type : MCQ Option Shuffling : Yes Display Question Number : Yes
Single Line Question Option : No Option Orientation : Vertical

Correct : 1 Wrong : 0.25

वर्तमान विदेश मंत्री कौन है?

Options :

1. ✘ मनोहर पर्रिकर
2. ✔ सुषमा स्वराज
3. ✘ स्मृति ईरानी
4. ✘ बंडारू दत्तात्रेय

Question Number : 178 Question Id : 7368156644 Question Type : MCQ Option Shuffling : Yes Display Question Number : Yes
Single Line Question Option : No Option Orientation : Vertical

Correct : 1 Wrong : 0.25

When is National Science Day celebrated in India?

Options :

1. ✔ February 28th
2. ✘ January 28th
3. ✘ March 15th
4. ✘ April 5th

Question Number : 178 Question Id : 7368156644 Question Type : MCQ Option Shuffling : Yes Display Question Number : Yes
Single Line Question Option : No Option Orientation : Vertical

Correct : 1 Wrong : 0.25

भारत में 'राष्ट्रीय विज्ञान दिवस' कब मनाया जाता है?

Options :

1. ✔ 28 फरवरी
2. ✘ 28 जनवरी
3. ✘ 15 मार्च
4. ✘ 5 अप्रैल

Question Number : 179 Question Id : 7368156645 Question Type : MCQ Option Shuffling : Yes Display Question Number : Yes
Single Line Question Option : No Option Orientation : Vertical

Correct : 1 Wrong : 0.25

Which Indian state was declared as 'first digital state' by Pranab Mukherjee in 2016?

Options :

1. ✘ Telangana
2. ✘ Maharashtra

3. ✘ Karnataka

4. ✔ Kerala

Question Number : 179 Question Id : 7368156645 Question Type : MCQ Option Shuffling : Yes Display Question Number : Yes
Single Line Question Option : No Option Orientation : Vertical

Correct : 1 Wrong : 0.25

वर्ष 2016 में, कौन से भारतीय राज्य को प्रणब मुखर्जी द्वारा 'प्रथम डिजिटल राज्य' घोषित किया गया?

Options :

1. ✘ तेलंगाना

2. ✘ महाराष्ट्र

3. ✘ कर्नाटक

4. ✔ केरल

Question Number : 180 Question Id : 7368156646 Question Type : MCQ Option Shuffling : Yes Display Question Number : Yes
Single Line Question Option : No Option Orientation : Vertical

Correct : 1 Wrong : 0.25

Who is winner of Ranji Trophy in 2016?

Options :

1. ✘ Rajasthan

2. ✘ Karnataka

3. ✔ Mumbai

4. ✘ Baroda

Question Number : 180 Question Id : 7368156646 Question Type : MCQ Option Shuffling : Yes Display Question Number : Yes
Single Line Question Option : No Option Orientation : Vertical

Correct : 1 Wrong : 0.25

2016 के रणजी ट्रॉफी का विजेता कौन है?

Options :

1. ✘ राजस्थान

2. ✘ कर्नाटक

3. ✔ मुंबई

4. ✘ बड़ौदा

Question Number : 181 Question Id : 7368156647 Question Type : MCQ Option Shuffling : Yes Display Question Number : Yes
Single Line Question Option : No Option Orientation : Vertical

Correct : 1 Wrong : 0.25

Who will act as the chairman of planning commission of India?

Options :

1. ✘ Home minister

2. ✘ President

3. ✘ Finance Minister

4. ✔ Prime Minister

Question Number : 181 Question Id : 7368156647 Question Type : MCQ Option Shuffling : Yes Display Question Number : Yes
Single Line Question Option : No Option Orientation : Vertical

Correct : 1 Wrong : 0.25

भारत के योजना आयोग के अध्यक्ष की भूमिका में कौन कार्य करेगा?

Options :

1. ✘ गृहमंत्री

2. ✘ राष्ट्रपति

3. ✘ वित्त मंत्री

4. ✔ प्रधानमंत्री

Question Number : 182 Question Id : 7368156648 Question Type : MCQ Option Shuffling : Yes Display Question Number : Yes
Single Line Question Option : No Option Orientation : Vertical

Correct : 1 Wrong : 0.25

Which one of the following is not a Direct Tax?

Options :

1. ✔ Excise Duty

2. ✘ Wealth Tax

3. ✘ Professional Tax

4. ✘ Corporation Tax

Question Number : 182 Question Id : 7368156648 Question Type : MCQ Option Shuffling : Yes Display Question Number : Yes
Single Line Question Option : No Option Orientation : Vertical

Correct : 1 Wrong : 0.25

निम्नलिखित में कौन एक प्रत्यक्ष कर नहीं है?

Options :

1. ✔ उत्पाद शुल्क

2. ✘ संपत्ति कर

3. ✘ व्यवसाय कर

4. ✘ निगम कर

Question Number : 183 Question Id : 7368156649 Question Type : MCQ Option Shuffling : Yes Display Question Number : Yes
Single Line Question Option : No Option Orientation : Vertical

Correct : 1 Wrong : 0.25

Which one of the following is responsible for development of Steel Industry in India?

Options :

1. ✘ TISCO

2. ✘ NDC

3. ✘ NABARD

4. ✔ SAIL

Question Number : 183 Question Id : 7368156649 Question Type : MCQ Option Shuffling : Yes Display Question Number : Yes
Single Line Question Option : No Option Orientation : Vertical

Correct : 1 Wrong : 0.25

निम्नलिखित में से कौन भारत में स्टील उद्योग के विकास के लिए जिम्मेदार है?

Options :

1. ✘ टिस्को (TISCO)

2. ✘ एन.डी.सी. (NDC)

3. ✘ नाबार्ड (NABARD)

4. ✔ सेल (SAIL)

Question Number : 184 Question Id : 7368156650 Question Type : MCQ Option Shuffling : Yes Display Question Number : Yes
Single Line Question Option : No Option Orientation : Vertical

Correct : 1 Wrong : 0.25

The production of Cement in India was first started at?

Options :

1. ✔ Madras

2. ✘ Calcutta

3. ✘ Bombay

4. ✘ Ahmedabad

Question Number : 184 Question Id : 7368156650 Question Type : MCQ Option Shuffling : Yes Display Question Number : Yes
Single Line Question Option : No Option Orientation : Vertical

Correct : 1 Wrong : 0.25

भारत में पहली बार सीमेंट का उत्पादन कहाँ शुरू किया था?

Options :

1. ✔ मद्रास

2. ✘ कलकत्ता

3. ✘ बम्बई

4. ✘ अहमदाबाद

Question Number : 185 Question Id : 7368156651 Question Type : MCQ Option Shuffling : Yes Display Question Number : Yes
Single Line Question Option : No Option Orientation : Vertical

Correct : 1 Wrong : 0.25

Which one of the following deals with rules of trade between the nations?

Options :

1. ✘ International Monetary Fund

2. ✔ World Trade Organization

3. ✘ International Labor Organization

4. ✘ EXIM bank

Question Number : 185 Question Id : 7368156651 Question Type : MCQ Option Shuffling : Yes Display Question Number : Yes
Single Line Question Option : No Option Orientation : Vertical

Correct : 1 Wrong : 0.25

निम्नलिखित में से कौन सी संस्था राष्ट्रों के बीच में होने वाले व्यापार के नियमों को नियंत्रित करता है?

Options :

1. ✘ अंतर्राष्ट्रीय मुद्रा कोष

2. ✔ विश्व व्यापार संगठन

3. ✘ अंतर्राष्ट्रीय श्रम संघ

4. ✘ एक्जिम बैंक

Question Number : 186 Question Id : 7368156652 Question Type : MCQ Option Shuffling : Yes Display Question Number : Yes
Single Line Question Option : No Option Orientation : Vertical

Correct : 1 Wrong : 0.25

The Indian Standard Time is ahead of Greenwich Mean Time by

Options :

1. ✔ 5 hour 30 min

2. ✘ 2 hour 30 min

3. ✘ 3 hour 30 min

4. ✘ 4 hours

Question Number : 186 Question Id : 7368156652 Question Type : MCQ Option Shuffling : Yes Display Question Number : Yes
Single Line Question Option : No Option Orientation : Vertical

Correct : 1 Wrong : 0.25

भारतीय मानक समय - ग्रीनविच मीन टाइम से _____ आगे है।

Options :

1. ✔ 5 घंटे 30 मिनट

2. ✘ 2 घंटे 30 मिनट

3. ✘ 3 घंटे 30 मिनट

4. ✘ 4 घंटे

Question Number : 187 Question Id : 7368156653 Question Type : MCQ Option Shuffling : Yes Display Question Number : Yes
Single Line Question Option : No Option Orientation : Vertical

Correct : 1 Wrong : 0.25

How many states in India share the coast line?

Options :

1. ✘ 8

2. ✘ 10

3. ✓ 9

4. ✗ 6

Question Number : 187 Question Id : 7368156653 Question Type : MCQ Option Shuffling : Yes Display Question Number : Yes
Single Line Question Option : No Option Orientation : Vertical

Correct : 1 Wrong : 0.25

भारत में कितने राज्यों को समुद्री तटरेखा प्राप्त हुई है?

Options :

1. ✗ 8

2. ✗ 10

3. ✓ 9

4. ✗ 6

Question Number : 188 Question Id : 7368156654 Question Type : MCQ Option Shuffling : Yes Display Question Number : Yes
Single Line Question Option : No Option Orientation : Vertical

Correct : 1 Wrong : 0.25

The International Airport of Lucknow is named after

Options :

1. ✗ Lal Bahadur Shastri

2. ✗ Rajiv Gandhi

3. ✗ B. R. Ambedkar

4. ✓ Chaudhary Charan Singh

Question Number : 188 Question Id : 7368156654 Question Type : MCQ Option Shuffling : Yes Display Question Number : Yes
Single Line Question Option : No Option Orientation : Vertical

Correct : 1 Wrong : 0.25

लखनऊ के अंतर्राष्ट्रीय हवाई अड्डे का नाम किसके नाम से रखा गया है?

Options :

1. ✗ लाल बहादुर शास्त्री

2. ✗ राजीव गांधी

3. ✗ बी. आर. अम्बेडकर

4. ✓ चौधरी चरण सिंह

Question Number : 189 Question Id : 7368156655 Question Type : MCQ Option Shuffling : Yes Display Question Number : Yes
Single Line Question Option : No Option Orientation : Vertical

Correct : 1 Wrong : 0.25

Where is 'India Gate' located?

Options :

1. ✗ Chandigarh

2. ✗ Jaipur

3. ✓ New Delhi

4. ✘ Mumbai

Question Number : 189 Question Id : 7368156655 Question Type : MCQ Option Shuffling : Yes Display Question Number : Yes
Single Line Question Option : No Option Orientation : Vertical

Correct : 1 Wrong : 0.25

‘इंडिया गेट’ कहाँ स्थित है?

Options :

1. ✘ चंडीगढ़

2. ✘ जयपुर

3. ✔ नई दिल्ली

4. ✘ मुंबई

Question Number : 190 Question Id : 7368156656 Question Type : MCQ Option Shuffling : Yes Display Question Number : Yes
Single Line Question Option : No Option Orientation : Vertical

Correct : 1 Wrong : 0.25

The first factory of synthetic rubber in India was set up at

Options :

1. ✘ Lucknow

2. ✔ Bareilly

3. ✘ Ghaziabad

4. ✘ Gurgaon

Question Number : 190 Question Id : 7368156656 Question Type : MCQ Option Shuffling : Yes Display Question Number : Yes
Single Line Question Option : No Option Orientation : Vertical

Correct : 1 Wrong : 0.25

भारत में सिंथेटिक रबर की पहली फैक्टरी कहाँ पर स्थापित की गई थी?

Options :

1. ✘ लखनऊ

2. ✔ बरेली

3. ✘ गाजियाबाद

4. ✘ गुड़गांव

Question Number : 191 Question Id : 7368156657 Question Type : MCQ Option Shuffling : Yes Display Question Number : Yes
Single Line Question Option : No Option Orientation : Vertical

Correct : 1 Wrong : 0.25

The place where Late Rajiv Gandhi was assassinated is

Options :

1. ✘ Mangalore

2. ✘ Madurai

3. ✔ Sriperumbudur

4. ✘ Rameshwaram

Question Number : 191 Question Id : 7368156657 Question Type : MCQ Option Shuffling : Yes Display Question Number : Yes
Single Line Question Option : No Option Orientation : Vertical

Correct : 1 Wrong : 0.25

स्व. राजीव गांधी की हत्या कहाँ की गई थी?

Options :

1. ✘ मंगलौर

2. ✘ मदुरई

3. ✔ श्रीपेरंबुदूर

4. ✘ रामेश्वरम

Question Number : 192 Question Id : 7368156658 Question Type : MCQ Option Shuffling : Yes Display Question Number : Yes
Single Line Question Option : No Option Orientation : Vertical

Correct : 1 Wrong : 0.25

Who introduced the first telegraph line in India?

Options :

1. ✘ Lord Cornwallis

2. ✘ William Bentinck

3. ✘ Warren Hastings

4. ✔ Lord Dalhousie

Question Number : 192 Question Id : 7368156658 Question Type : MCQ Option Shuffling : Yes Display Question Number : Yes
Single Line Question Option : No Option Orientation : Vertical

Correct : 1 Wrong : 0.25

भारत में पहली टेलीग्राफ लाइन का आरंभ किसने किया था?

Options :

1. ✘ लार्ड कार्नवालिस

2. ✘ विलियम बेंटिक

3. ✘ वारेन हेस्टिंग्स

4. ✔ लार्ड डलहौजी

Question Number : 193 Question Id : 7368156659 Question Type : MCQ Option Shuffling : Yes Display Question Number : Yes
Single Line Question Option : No Option Orientation : Vertical

Correct : 1 Wrong : 0.25

Who built the famous 'Charminar' in Hyderabad?

Options :

1. ✔ Quli Qutub Shah

2. ✘ Alauddin Khilji

3. ✘ Jalaluddin Khilji

4. ✘ Muhammad bin Tughluq

Question Number : 193 Question Id : 7368156659 Question Type : MCQ Option Shuffling : Yes Display Question Number : Yes
Single Line Question Option : No Option Orientation : Vertical

Correct : 1 Wrong : 0.25

हैदराबाद के प्रसिद्ध 'चारमीनार' का निर्माण किसने करवाया था?

Options :

1. ✔ कुली कुतुब शाह
2. ✘ अलाउद्दीन खिलजी
3. ✘ जलालुद्दीन खिलजी
4. ✘ मुहम्मद बिन तुगलक

Question Number : 194 Question Id : 7368156660 Question Type : MCQ Option Shuffling : Yes Display Question Number : Yes
Single Line Question Option : No Option Orientation : Vertical

Correct : 1 Wrong : 0.25

Who was the founder of Nanda dynasty?

Options :

1. ✘ Aitareya
2. ✘ Ajathshatru
3. ✘ Raja Ram Mohan Roy
4. ✔ Mahapadmananda

Question Number : 194 Question Id : 7368156660 Question Type : MCQ Option Shuffling : Yes Display Question Number : Yes
Single Line Question Option : No Option Orientation : Vertical

Correct : 1 Wrong : 0.25

नंद वंश के संस्थापक कौन थे?

Options :

1. ✘ ऐतरेय
2. ✘ अजातशत्रु
3. ✘ राजा राम मोहन राय
4. ✔ महापद्मानंद

Question Number : 195 Question Id : 7368156661 Question Type : MCQ Option Shuffling : Yes Display Question Number : Yes
Single Line Question Option : No Option Orientation : Vertical

Correct : 1 Wrong : 0.25

Who among the following was a noted physician in the court of Chandra Gupta Vikramaditya?

Options :

1. ✘ Susruta
2. ✔ Dhanwantari

3. ✘ Charaka
4. ✘ Kanishka

Question Number : 195 Question Id : 7368156661 Question Type : MCQ Option Shuffling : Yes Display Question Number : Yes
Single Line Question Option : No Option Orientation : Vertical

Correct : 1 Wrong : 0.25

निम्नलिखित में से कौन, चन्द्रगुप्त विक्रमादित्य के दरबार में विख्यात चिकित्सक थे?

Options :

1. ✘ सुश्रुत
2. ✔ धन्वंतरी
3. ✘ चरक
4. ✘ कनिष्क

Question Number : 196 Question Id : 7368156662 Question Type : MCQ Option Shuffling : Yes Display Question Number : Yes
Single Line Question Option : No Option Orientation : Vertical

Correct : 1 Wrong : 0.25

The term 'hospital pass' is associated with which of the following game?

Options :

1. ✘ Football
2. ✘ Hockey
3. ✔ Rugby
4. ✘ Ice Hockey

Question Number : 196 Question Id : 7368156662 Question Type : MCQ Option Shuffling : Yes Display Question Number : Yes
Single Line Question Option : No Option Orientation : Vertical

Correct : 1 Wrong : 0.25

निम्नलिखित में से किस खेल से 'हॉस्पिटल पास' पद का संबंध है?

Options :

1. ✘ फुटबॉल
2. ✘ हॉकी
3. ✔ रग्बी
4. ✘ आइस हॉकी

Question Number : 197 Question Id : 7368156663 Question Type : MCQ Option Shuffling : Yes Display Question Number : Yes
Single Line Question Option : No Option Orientation : Vertical

Correct : 1 Wrong : 0.25

'Citius-Altius-Fortius' is the motto of which of the following sports event?

Options :

1. ✔ Olympics
2. ✘ Wimbledon

3. ✘ FIFA world Cup

4. ✘ Asian Games

Question Number : 197 Question Id : 7368156663 Question Type : MCQ Option Shuffling : Yes Display Question Number : Yes
Single Line Question Option : No Option Orientation : Vertical

Correct : 1 Wrong : 0.25

निम्नलिखित में कौन से खेल कार्यक्रम का आदर्श वाक्य 'साइटस-एल्टिस-फोर्टिस' है?

Options :

1. ✔ ओलंपिक

2. ✘ विम्बलडन

3. ✘ फीफा विश्व कप

4. ✘ एशियन गेम्स

Question Number : 198 Question Id : 7368156664 Question Type : MCQ Option Shuffling : Yes Display Question Number : Yes
Single Line Question Option : No Option Orientation : Vertical

Correct : 1 Wrong : 0.25

Which Indian cricketer is nicknamed as 'Sunny'?

Options :

1. ✘ Mohinder Amarnath

2. ✘ Ravi Shastri

3. ✔ Sunil Gavaskar

4. ✘ Sachin Tendulkar

Question Number : 198 Question Id : 7368156664 Question Type : MCQ Option Shuffling : Yes Display Question Number : Yes
Single Line Question Option : No Option Orientation : Vertical

Correct : 1 Wrong : 0.25

कौन से भारतीय क्रिकेटर का उपनाम 'सनी' है?

Options :

1. ✘ मोहिंदर अमरनाथ

2. ✘ रवि शास्त्री

3. ✔ सुनील गावस्कर

4. ✘ सचिन तेंडुलकर

Question Number : 199 Question Id : 7368156665 Question Type : MCQ Option Shuffling : Yes Display Question Number : Yes
Single Line Question Option : No Option Orientation : Vertical

Correct : 1 Wrong : 0.25

Which Indian among the following won Gold medal in 2008 Beijing Olympics?

Options :

1. ✘ Sushil Kumar

2. ✘ Vijay Kumar

3. ✘ Rajyavardhan Singh Rathore

4. ✔ Abhinav Bindra

Question Number : 199 Question Id : 7368156665 Question Type : MCQ Option Shuffling : Yes Display Question Number : Yes
Single Line Question Option : No Option Orientation : Vertical

Correct : 1 Wrong : 0.25

निम्नलिखित में से कौन से भारतीय ने 2008 बीजिंग ओलंपिक में स्वर्ण पदक जीता है?

Options :

1. ✘ सुशील कुमार

2. ✘ विजय कुमार

3. ✘ राज्यवर्धन सिंह राठौड़

4. ✔ अभिनव बिंद्रा

Question Number : 200 Question Id : 7368156666 Question Type : MCQ Option Shuffling : Yes Display Question Number : Yes
Single Line Question Option : No Option Orientation : Vertical

Correct : 1 Wrong : 0.25

2016 के ग्रीष्मकालीन ओलंपिक का आयोजन कौन सा देश कर रहा है?

Options :

1. ✘ संयुक्त राज्य अमेरिका

2. ✘ भारत

3. ✔ ब्राजील

4. ✘ इंग्लैंड

Question Number : 200 Question Id : 7368156666 Question Type : MCQ Option Shuffling : Yes Display Question Number : Yes
Single Line Question Option : No Option Orientation : Vertical

Correct : 1 Wrong : 0.25

Which country is hosting 2016 summer Olympics?

Options :

1. ✘ United States of America

2. ✘ India

3. ✔ Brazil

4. ✘ England



Latest Sarkari jobs, Govt Exam alerts, Results and Vacancies

- ▶ Latest News and Notification
- ▶ Exam Paper Analysis
- ▶ Topic-wise weightage
- ▶ Previous Year Papers with Answer Key
- ▶ Preparation Strategy & Subject-wise Books

To know more [Click Here](#)



www.prepp.in