

**SSC
GD**

**Previous Year Paper
24 Nov 2021 Shift 1**

Constable GD in CAPFs NIA SSF and Rifleman GD in Assam Rifles Examination 2021

Roll Number	
Candidate Name	
Venue Name	iON Digital Zone iDZ 2 Moula Ali
Exam Date	24/11/2021
Exam Time :	9:00 AM - 10:30 AM
Subject	Constable GD 2021

Section : Part A General Intelligence and Reasoning

Q.1 Eight friends, K, L, M, N, O, P, Q and R, are sitting at two circular tables, one smaller inner table and one bigger outer table. Both the circular tables have the same centre. Four persons are sitting at each table at equal distances between them, facing the centre. M is to the immediate right of L. Q and N are sitting in the south and are facing R and L. M is sitting opposite to O at the same table. P is sitting opposite K at the outer table. N is between P and K at the same table. L is between M and O at the same table. Who is sitting in the north at the outer table?

- Ans
- 1. K
 - 2. P
 - 3. R
 - 4. L

Question ID : 65497829863
Status : Not Answered
Chosen Option : -

Q.2 Read the given statements and conclusions carefully. Assuming that the information given in the statements is true, even if it appears to be at variance with commonly known facts, decide which of the given conclusions logically follow(s) from the statements.

Statements:
All rats are dogs.
Some rats are hens.

Conclusions:
I. Some rats are dogs.
II. Some hens are rats.

- Ans
- 1. Only conclusion I follows
 - 2. Neither conclusion I nor II follows
 - 3. Only conclusion II follows
 - 4. Both conclusions I and II follow

Question ID : 65497829877
Status : Answered
Chosen Option : 4

Q.3 Select the Venn diagram that best represents the relationship between the following classes.

Niece, Beauticians, Women

Ans



Question ID : 65497829875
Status : Answered
Chosen Option : 1

Q.4 Select the option that is related to the third number in the same way as the second number is related to the first number and the sixth number is related to the fifth number.

7 : 113 :: 11 : ? :: 15 : 481

Ans ✗ 1. 388

✗ 2. 155

✗ 3. 340

✓ 4. 265

Question ID : 65497829864
Status : Answered
Chosen Option : 2

Q.5 The ages of two sisters Rajini and Rani are in the proportion of 2 : 3. After 6 years, the proportion of their ages will be 3 : 4. What is the current age of Rajini?

Ans ✗ 1. 14 years

✗ 2. 16 years

✗ 3. 18 years

✓ 4. 12 years

Question ID : 65497829879
Status : Answered
Chosen Option : 4

Q.6 Select the number from among the given options that can replace the question mark (?) in the following series.

2, 5, 11, 17, ?, 31, 41

- Ans 1. 23
 2. 25
 3. 21
 4. 29

Question ID : 65497829870
Status : Answered
Chosen Option : 1

Q.7 In a certain code language, 'RAT' is coded as '39' and 'DOG' is coded as '26'. How will 'YAK' be coded in that language?

- Ans 1. 31
 2. 37
 3. 25
 4. 43

Question ID : 65497829869
Status : Answered
Chosen Option : 2

Q.8 Pointing towards a boy, Ranjita said, "He is my husband's father-in-law's only daughter's son's father's only sister's son". How is that boy's mother related to Ranjita's husband?

- Ans 1. Daughter
 2. Paternal aunt
 3. Mother
 4. Sister

Question ID : 65497829887
Status : Not Answered
Chosen Option : -

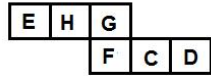
Q.9 Select the option that is related to the third term in the same way as the second term is related to the first term.

TONGUE : PUHOFV :: MASTER : ?

- Ans 1. PCTHVS
 2. TBOSFU
 3. BNUTSF
 4. SFUTBN

Question ID : 65497829885
Status : Not Answered
Chosen Option : -

Q.10 A cube is made by folding the given sheet. In the cube so formed, which letter will be on the face opposite to the face showing 'C'?



- Ans
- 1. H
 - 2. E
 - 3. G
 - 4. F

Question ID : 65497829866
Status : Answered
Chosen Option : 1

Q.11 'Viticulture' is related to 'Grapes' in the same way as 'Floriculture' is related to '_____'.
Ans

- 1. Silkworm
- 2. Fluorine
- 3. Flowers
- 4. Plants

Question ID : 65497829873
Status : Answered
Chosen Option : 3

Q.12 Select the letter-cluster from among the given options that can replace the question mark (?) in the following series.

SRQ, PON, ?, JIH, GFE

- Ans
- 1. MLK
 - 2. LKM
 - 3. KLM
 - 4. MKL

Question ID : 65497829872
Status : Answered
Chosen Option : 1

Q.13 In a certain code language, 'FLOAT' is written as 'ROU', 'CLAIM' is written as 'OAV'. How will 'ARMED' be written in that language?
Ans

- 1. RFC
- 2. DMK
- 3. SMI
- 4. TFE

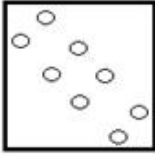
Question ID : 65497829886
Status : Answered
Chosen Option : 3

Q.14 The sequence of folding a piece of paper and the manner in which the folded paper has been cut is shown in the following figures. How would this paper look when unfolded?

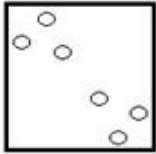


Ans

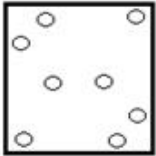
✓ 1.



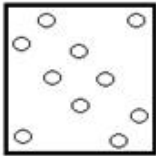
✗ 2.



✗ 3.



✗ 4.



Question ID : 65497829880

Status : Answered

Chosen Option : 1

Q.15 Study the given pattern carefully and select the number that can replace the question mark (?) in it.

6 15 48

7 17 55

13 29 ?

Ans ✗ 1. 79

✗ 2. 78

✓ 3. 97

✗ 4. 87

Question ID : 65497829878

Status : Not Answered

Chosen Option : -

Q.16 What will be the value of the given expression if 'A' means '+', 'B' means '-', 'C' means 'x', and 'D' means '÷'?

$$36 A (15 C 4) B (21 A 13) A 24 D (16 D 2) = ?$$

- Ans
- 1. 96
 - 2. 83
 - 3. 65
 - 4. 51

Question ID : 65497829865
Status : Answered
Chosen Option : 3

Q.17 Select the combination of letters that when sequentially placed in the blanks of the given series, will complete the series.

O _ K M _ O P K _ A O _ _ M A

- Ans
- 1. P A M P O
 - 2. P M A P K
 - 3. M A K A P
 - 4. P A M P K

Question ID : 65497829882
Status : Answered
Chosen Option : 4

Q.18 Select the option that is NOT embedded in the given figure (rotation is NOT allowed).



- Ans
- 1.
 - 2.
 - 3.
 - 4.

Question ID : 65497829867
Status : Answered
Chosen Option : 2

Q.19 Select the number from among the given options that can replace the question mark (?) in the following series.

6, 22, 70, 214, ?, 1942

- Ans 1. 646
 2. 638
 3. 280
 4. 430

Question ID : 65497829883
Status : Answered
Chosen Option : 1

Q.20 In a certain code language, 'LAYOUT' is written as 'WRRVDI'. How will 'CHETAK' be written in that language?

- Ans 1. HQXEBF
 2. NWXKBZ
 3. HXQBEF
 4. NXWBKZ

Question ID : 65497829876
Status : Answered
Chosen Option : 4

Q.21 Select the correct option that indicates the arrangement of the given words in the order in which they appear in an English dictionary.

1. Acoustic
2. Academy
3. Accent
4. Accord
5. Active

- Ans 1. 2, 3, 4, 1, 5
 2. 2, 4, 3, 1, 5
 3. 2, 3, 4, 5, 1
 4. 2, 3, 1, 4, 5

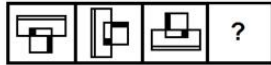
Question ID : 65497829881
Status : Answered
Chosen Option : 1

Q.22 P, Q, R, S, T, U and V are sitting in a row on a wall facing towards the west. R is just to the left of S. Q is at one of the end points and T is his neighbour. V is sitting between T and U. S is fifth from the north end. Who among the following persons is sitting exactly in the middle of the row?

- Ans 1. U
 2. V
 3. T
 4. Q

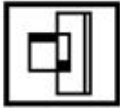
Question ID : 65497829874
Status : Not Answered
Chosen Option : -

Q.23 Select the figure from among the given options that can replace the question mark (?) in the following series.

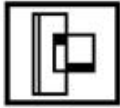


Ans

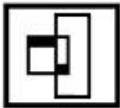
✗ 1.



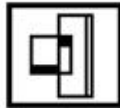
✗ 2.



✗ 3.

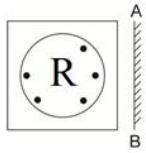


✓ 4.



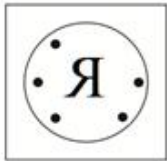
Question ID : 65497829884
Status : Answered
Chosen Option : 4

Q.24 Select the correct mirror image of the given figure when the mirror is placed at 'AB' as shown.




Ans

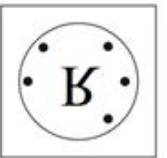
✓ 1.




✗ 2.



✗ 3.



✗ 4.



Question ID : 65497829871
Status : Answered
Chosen Option : 1

Q.25 Four letter-clusters have been given, out of which three are alike in some manner and one is different. Select the letter-cluster that is different.

Ans ✗ 1. FHLR

✗ 2. DFJP

✗ 3. NPTZ

✓ 4. GIMU

Question ID : 65497829868
Status : Answered
Chosen Option : 4

Q.1 Which of the following statements about Emperor Ashoka is FALSE?

- Ans 1. Ashoka was opposed by a wise man named Chanakya (also known as Kautilya).
 2. Ashoka belonged to the Mauryan dynasty.
 3. The empire that Ashoka ruled was founded by his grandfather.
 4. Ashoka is the only king in the history of the world who gave up conquest after winning a war.

Question ID : 65497829910
Status : Answered
Chosen Option : 3

Q.2 In September 2021, _____ became the first Indian woman to win two Paralympic medals.

- Ans 1. Bhavina Patel
 2. Avani Lekhara
 3. Ekta Bhyan
 4. Deepa Malik

Question ID : 65497829905
Status : Answered
Chosen Option : 1

Q.3 Which of the following countries hosted the Asia Pacific Economic Cooperation in November 2020?

- Ans 1. Malaysia
 2. Hong Kong
 3. Japan
 4. Singapore

Question ID : 65497829901
Status : Answered
Chosen Option : 4

Q.4 Under the _____ system of land revenue, the ownership rights were handed over to the peasants and the British Government collected taxes directly from them.

- Ans 1. Ryotwari
 2. Mahalwari
 3. Malguzari
 4. Taluqdar

Question ID : 65497829907
Status : Answered
Chosen Option : 1

Q.5 A _____ is a passive two-terminal electrical component that implements electrical resistance as a circuit element.

- Ans
- 1. transistor
 - 2. resistor
 - 3. diode
 - 4. capacitor

Question ID : 65497829890
Status : Answered
Chosen Option : 1

Q.6 Which of the following is another name for Vitamin K1?

- Ans
- 1. Phylloquinone
 - 2. Nicotinic acid
 - 3. Thiamine
 - 4. Riboflavin

Question ID : 65497829889
Status : Answered
Chosen Option : 1

Q.7 Article _____ of the Constitution of India deals with Administration of Union Territories.

- Ans
- 1. 233
 - 2. 239
 - 3. 224
 - 4. 228

Question ID : 65497829911
Status : Not Answered
Chosen Option : -

Q.8 What is the maximum amount of loan permissible under the 'Shishu scheme' of the Pradhan Mantri MUDRA Yojana?

- Ans
- 1. ₹2,00,000
 - 2. ₹5,00,000
 - 3. ₹1,00,000
 - 4. ₹50,000

Question ID : 65497829896
Status : Not Answered
Chosen Option : -

Q.9 Who among the following is the author of the book 'The Day I Stopped Drinking Milk'?

- Ans 1. Twinkle Khanna
 2. Roshni Nilkani
 3. Sudha Murty
 4. Nita Ambani

Question ID : 65497829891
Status : Not Answered
Chosen Option : -

Q.10 Jawai Bandh is a reservoir built across Jawai River, which is a tributary of the:

- Ans 1. Luni river
 2. Banas river
 3. Chambal river
 4. Mahi river

Question ID : 65497829897
Status : Not Answered
Chosen Option : -

Q.11 Padma Shri awardee Sitara Devi was known for her contribution to the field of _____.

- Ans 1. Kathak
 2. Odissi
 3. Mudi yettu
 4. Sattriya

Question ID : 65497829892
Status : Answered
Chosen Option : 1

Q.12 Who won the Women's Singles title at the US Open 2020 tennis tournament?

- Ans 1. Naomi Osaka
 2. Maria Sharapova
 3. Victoria Azarenka
 4. Serena Williams

Question ID : 65497829898
Status : Answered
Chosen Option : 1

Q.13 The highest peak of the Aravalli range is located in _____.

- Ans 1. Gujarat
 2. Delhi
 3. Rajasthan
 4. Haryana

Question ID : 65497829904
Status : Answered
Chosen Option : 1

Q.14 What was India's rank in the Ease of Doing Business Index 2020?

- Ans 1. 54
 2. 63
 3. 71
 4. 67

Question ID : 65497829899
Status : Answered
Chosen Option : 1

Q.15 In September 2021, Coal India Ltd. started a pilot project to replace use of diesel with _____ in dumpers.

- Ans 1. hydrogen
 2. ethanol
 3. liquefied natural gas (LNG)
 4. compressed natural gas (CNG)

Question ID : 65497829908
Status : Answered
Chosen Option : 1

Q.16 Who among the following is the author of the play 'Wedding Album'?

- Ans 1. Badal Sarkar
 2. Mahesh Dattani
 3. Girish Karnad
 4. Vijay Tendulkar

Question ID : 65497829894
Status : Not Answered
Chosen Option : -

Q.17 6 April 1919 was observed as a day of non-violent opposition to _____.

- Ans 1. the Simon Commission
 2. the Rowlatt Act
 3. the Cabinet Mission Plan
 4. the Morely-Minto Reforms

Question ID : 65497829909
Status : Answered
Chosen Option : 2

Q.18 Which of the following pieces is NOT allowed to move backward on a chess board?

- Ans 1. Bishop
 2. Pawn
 3. King
 4. Queen

Question ID : 65497829895
Status : Answered
Chosen Option : 1

Q.19 The Zika virus disease is caused by a virus transmitted primarily by the _____ species of mosquitoes.

- Ans 1. Culex
 2. Anopheles
 3. Aedes
 4. Haemagogus

Question ID : 65497829906
Status : Not Answered
Chosen Option : -

Q.20 Which of the following is a ferrous mineral?

- Ans 1. Manganese
 2. Copper
 3. Bauxite
 4. Zinc

Question ID : 65497829893
Status : Answered
Chosen Option : 3

Q.21 In which of the following years was the 'Pradhan Mantri Ujjwala Yojana' launched?

- Ans 1. 2014
 2. 2018
 3. 2020
 4. 2016

Question ID : 65497829902
Status : Answered
Chosen Option : 2

Q.22 In which Schedule of the Constitution of India is the language 'Hindi' included?

- Ans 1. Tenth
 2. Fourth
 3. Fifth
 4. Eighth

Question ID : 65497829900
Status : Answered
Chosen Option : 4

Q.23 In June 2021, the Ministry of Heavy Industries increased the subsidy for electric two-wheelers to _____ per kWh under the FAME India Scheme Phase II.

- Ans
- 1. ₹10,000
 - 2. ₹20,000
 - 3. ₹25,000
 - 4. ₹15,000

Question ID : 65497829912
Status : Not Answered
Chosen Option : -

Q.24 In which of the following cities is the Dev-Deepawali' festival celebrated?

- Ans
- 1. Ujjain
 - 2. Ayodhya
 - 3. Varanasi
 - 4. Prayagraj

Question ID : 65497829888
Status : Not Answered
Chosen Option : -

Q.25 In which year was the Oudh Kisan Sabha set up?

- Ans
- 1. 1930
 - 2. 1925
 - 3. 1920
 - 4. 1928

Question ID : 65497829903
Status : Not Answered
Chosen Option : -

Section : Part C Elementary Mathematics

Q.1 In a transaction, the profit percentage is 70% of the cost. If the cost further increases by 40%, but the selling price remains the same, what is the difference between the two profit percentages?

- Ans
- 1. 48.57%
 - 2. 40.57%
 - 3. 45.87%
 - 4. 40.0%

Question ID : 65497829918
Status : Answered
Chosen Option : 4

Q.2 An automobile financier claims to be lending money at simple interest, but he includes the interest every six months for calculating the principal. If he is charging an interest of 14%, the effective rate of interest becomes:

- Ans**
- 1. 15%
 - 2. 14.49%
 - 3. 14.35%
 - 4. 15.49%

Question ID : 65497829919
Status : Answered
Chosen Option : 2

Q.3 A calculates his profit percentage on the selling price of an article, whereas B calculates his profit on the cost price of the same article. The selling price of both of them is the same and both get 40% profit. If the difference between their profits is ₹120, then the selling price (in ₹) of the article is:

- Ans**
- 1. 1,120
 - 2. 1,020
 - 3. 1,050
 - 4. 980

Question ID : 65497829932
Status : Not Answered
Chosen Option : -

Q.4 The average of 19 numbers is 24. The average of the first 8 numbers is 26.5 and that of the last 12 numbers is 21.5. If the 8th number is excluded, then what will be the average (correct to one decimal point) of the remaining numbers?

- Ans**
- 1. 24.6
 - 2. 25.2
 - 3. 22.8
 - 4. 23.4

Question ID : 65497829925
Status : Answered
Chosen Option : 3

Q.5 A, B and C are three numbers. A is 48% less than B and C is 20% more than the sum of A and B. By what percentage (correct to one decimal place) is B less than C?

- Ans**
- 1. 48.4%
 - 2. 45.2%
 - 3. 72.8%
 - 4. 82.4%

Question ID : 65497829927
Status : Not Answered
Chosen Option : -

Q.6 Find the value of x in the expression $20\% \text{ of } 80 + 2x = 45\% \text{ of } 30 + 20\% \text{ of } 85$.

- Ans
- ✓ 1. $7\frac{1}{4}$
 - ✗ 2. $7\frac{3}{4}$
 - ✗ 3. $7\frac{1}{2}$
 - ✗ 4. $7\frac{1}{3}$

Question ID : 65497829931
Status : Answered
Chosen Option : 1

Q.7 Two numbers are in the ratio $5 : 9$. If their HCF is 14, then what is their LCM?

- Ans
- ✗ 1. 8820
 - ✗ 2. 196
 - ✗ 3. 56
 - ✓ 4. 630

Question ID : 65497829913
Status : Answered
Chosen Option : 4

Q.8 The four walls of a room with dimensions $12 \text{ m} \times 15 \text{ m} \times 20 \text{ m}$ are to be white washed at the rate of $\text{₹}2/\text{m}^2$. Find the cost.

- Ans
- ✗ 1. ₹2,980
 - ✗ 2. ₹1,340
 - ✗ 3. ₹1,150
 - ✓ 4. ₹2,160

Question ID : 65497829921
Status : Answered
Chosen Option : 4

Q.9 A person lent a certain sum of money at 5% simple interest. If the interest after 6 years is ₹5,600 less than the sum lent, then what is the sum lent?

- Ans
- 1. ₹4,307 $\frac{9}{13}$
 - 2. ₹18,666 $\frac{2}{3}$
 - 3. ₹9,200
 - 4. ₹8,000

Question ID : 65497829916
Status : Answered
Chosen Option : 2

Q.10 The value of $\left(1\frac{1}{9} \times 1\frac{1}{20} \div \frac{21}{38} - \frac{1}{3}\right) \times \frac{3}{8} - \left(\frac{2}{3} \div \frac{3}{4} \text{ of } \frac{5}{9}\right) \div 3\frac{1}{5} + 1\frac{1}{6}$ is:

- Ans
- 1. $1\frac{1}{2}$
 - 2. $1\frac{1}{3}$
 - 3. $1\frac{1}{6}$
 - 4. $1\frac{1}{4}$

Question ID : 65497829933
Status : Answered
Chosen Option : 2

Q.11 Sunderlal distributed his savings of ₹1,62,000 among his wife, 3 sons and a daughter in such a way that his wife gets double of what his daughter gets and his daughter gets double of what each of his sons get. How much will his daughter get?

- Ans
- 1. ₹18,000
 - 2. ₹36,000
 - 3. ₹72,000
 - 4. ₹27,000

Question ID : 65497829915
Status : Answered
Chosen Option : 4

Q.12 A shopkeeper gives 17% discount on the discounted price after giving an initial discount of 12% on the marked price of a refrigerator. If the final sale price is ₹21,912, the marked price (in ₹) is:

- Ans
- 1. 28,250
 - 2. 31,500
 - 3. 30,000
 - 4. 27,000

Question ID : 65497829917
Status : Not Answered
Chosen Option : -

Q.13 The ratio of train and bus fares from A to B is 3 : 5. If the train fare is increased by 15% and bus fare is increased by 10%, then what will be the ratio of the new fares of train and bus?

- Ans
- 1. 69 : 110
 - 2. 70 : 99
 - 3. 67 : 97
 - 4. 77 : 105

Question ID : 65497829922
Status : Answered
Chosen Option : 1

Q.14 The ages of Ramesh and his wife are 40 years and 36 years, respectively. If the average age of their son and 2 daughters is 13 years, then what is the average age of the family?

- Ans
- 1. $20\frac{2}{5}$ years
 - 2. $25\frac{1}{2}$ years
 - 3. 23 years
 - 4. $29\frac{2}{3}$ years

Question ID : 65497829914
Status : Answered
Chosen Option : 3

Q.15 A manufacturer marked an item for ₹1,400 and allowed 25% discount to a retailer, who sold it by earning 12% profit. At what price (in ₹) did the retailer sell the item?

- Ans
- 1. 1,176
 - 2. 1,268
 - 3. 1,200
 - 4. 1,250

Question ID : 65497829936
Status : Answered
Chosen Option : 2

Q.16 The list price of an article is ₹850. It is sold for ₹528.87, after giving three successive discounts of 20%, 15% and $x\%$ on the list price. What is the value of x ?

- Ans**
- 1. 8
 - 2. 9
 - 3. 8.5
 - 4. 9.5

Question ID : 65497829926
Status : Not Answered
Chosen Option : -

Q.17 A boat goes 10 km upstream and 12 km downstream in 4 hours. It can also go $7\frac{1}{2}$ km upstream and 7 km downstream in $2\frac{3}{4}$ hours. What is the speed (in km/h) of the boat when going upstream?

- Ans**
- 1. 7
 - 2. 6
 - 3. 8
 - 4. 4

Question ID : 65497829929
Status : Not Answered
Chosen Option : -

Q.18 The cost of 2 dozen bananas is ₹240 and the cost of 18 lemons is ₹90. Find the ratio of the cost of 1 lemon to that of one banana.

- Ans**
- 1. 1 : 2
 - 2. 2 : 3
 - 3. 3 : 2
 - 4. 2 : 1

Question ID : 65497829920
Status : Answered
Chosen Option : 1

Q.19 If the diameter of a sphere is 56 cm, then what is its surface area? (Take $\pi = \frac{22}{7}$)

- Ans**
- 1. 9856 cm^2
 - 2. 9556 cm^2
 - 3. 9756 cm^2
 - 4. 9806 cm^2

Question ID : 65497829924
Status : Answered
Chosen Option : 1

Q.20 Simplify the following expression.

$$2 \div [(-6) \div 2 \times 3] \times 3 - 1$$

- Ans
- 1. $-1\frac{2}{3}$
 - 2. $-\frac{4}{9}$
 - 3. -4
 - 4. -7

Question ID : 65497829935
Status : Answered
Chosen Option : 1

Q.21 A worker can complete a job in 25 days. If supervisor are 25% more efficient than worker, then how many days will 1 supervisor and 5 workers, working together, take to complete the job?

- Ans
- 1. $3\frac{1}{2}$
 - 2. $4\frac{1}{4}$
 - 3. 4
 - 4. 5

Question ID : 65497829937
Status : Answered
Chosen Option : 3

Q.22 Find the greatest possible length which can be used to measure exactly the lengths 4 m 90 cm, 3 m 85 cm and 12 m 95 cm.

- Ans
- 1. 35 cm
 - 2. 25 cm
 - 3. 20 cm
 - 4. 45 cm

Question ID : 65497829930
Status : Answered
Chosen Option : 1

Q.23 A sum of ₹1,727 is divided into three parts A, B and C so that their amounts after 3, 4 and 5 years, respectively, are equal, the rate of simple interest being 5% per annum. How much is A?

- Ans
- 1. ₹670
 - 2. ₹552
 - 3. ₹575
 - 4. ₹600

Question ID : 65497829923
Status : Answered
Chosen Option : 3

Q.24 The ratio of efficiencies of X and Y for doing a certain work is 5 : 9. Working together, they can complete a work in 15 days. X alone will complete $66\frac{2}{3}\%$ of the same work in:

- Ans**
- 1. 28 days
 - 2. 24 days
 - 3. 35 days
 - 4. 30 days

Question ID : 65497829928
Status : Answered
Chosen Option : 1

Q.25 Train A passes an electric pole in 15 seconds, moving at 60 km/h. It crosses train B moving in the opposite direction at 48 km/h, in 19 seconds. What is the length (in m) of train B?

- Ans**
- 1. 350
 - 2. 280
 - 3. 300
 - 4. 320

Question ID : 65497829934
Status : Answered
Chosen Option : 4

Section : Part D English

Q.1 Select the most appropriate meaning of the given idiom.

Elephant in the room

- Ans**
- 1. An obvious issue left unaddressed due to its sensitivity
 - 2. An extremely fat person sitting all alone in a room
 - 3. A wild untamed animal left to wander astray
 - 4. A pretty affair which is kept a secret

Question ID : 65497829942
Status : Answered
Chosen Option : 4

Q.2 Select the most appropriate meaning of the given idiom.

Hands down

- Ans**
- 1. Without any weapons
 - 2. Easily and without doubt
 - 3. With sufficient strength
 - 4. Very weakly and slowly

Question ID : 65497829947
Status : Answered
Chosen Option : 4

Q.3 Select the option that can be used as a one-word substitute for the given group of words.

Natural skill at doing something

- Ans
- 1. Sense
 - 2. Awareness
 - 3. Knack
 - 4. Passion

Question ID : 65497829952
Status : Answered
Chosen Option : 1

Q.4 Select the option that will improve the underlined part of the given sentence. In case no improvement is needed, select 'No improvement required'.

Try harder, don't give away so easily.

- Ans
- 1. give back
 - 2. give up
 - 3. give out
 - 4. No improvement required

Question ID : 65497829948
Status : Answered
Chosen Option : 2

Q.5 Select the option that can be used as a one-word substitute for the given group of words.

A person who investigates and solves crimes

- Ans
- 1. Invigilator
 - 2. Detective
 - 3. Explorer
 - 4. Inventor

Question ID : 65497829957
Status : Answered
Chosen Option : 2

Q.6 Select the option that will improve the underlined part of the given sentence. In case no improvement is needed, select 'No improvement required'.

It never dawned to him if he could be in danger.

- Ans
- 1. dawned up to him that
 - 2. dawned on him that
 - 3. dawned at him whether
 - 4. No improvement required

Question ID : 65497829955
Status : Not Answered
Chosen Option : -

Q.7 Select the most appropriate option to fill in the blank.

The protesters _____ when the police used tear gas.

- Ans
- 1. regretted
 - 2. waved
 - 3. assembled
 - 4. dispersed

Question ID : 65497829940
Status : Answered
Chosen Option : 4

Q.8 Select the most appropriate option to fill in the blank.

Asha has _____ the house beautifully for the party.

- Ans
- 1. improved
 - 2. decorated
 - 3. planned
 - 4. produced

Question ID : 65497829949
Status : Answered
Chosen Option : 2

Q.9 The following sentence has been split into four segments. Identify the segment that contains a grammatical error.

We have / run out eggs; / could you buy / some more?

- Ans
- 1. could you buy
 - 2. run out eggs
 - 3. some more
 - 4. We have

Question ID : 65497829950
Status : Answered
Chosen Option : 1

Q.10 The following sentence has been split into four segments. Identify the segment that contains a grammatical error.

Their dog is / more better / trained than / our dog.

- Ans
- 1. Their dog is
 - 2. more better
 - 3. our dog
 - 4. trained than

Question ID : 65497829944
Status : Answered
Chosen Option : 2

Q.11 Select the most appropriate ANTONYM of the given word.

Persuade

- Ans 1. Halt
 2. Lead
 3. Coax
 4. Sway

Question ID : 65497829951
Status : Answered
Chosen Option : 1

Q.12 Select the most appropriate SYNONYM of the given word.

Stray

- Ans 1. Casual
 2. Careless
 3. Fickle
 4. Homeless

Question ID : 65497829956
Status : Answered
Chosen Option : 4

Q.13 Select the most appropriate synonym of the given word.

Reliable

- Ans 1. Wealthy
 2. Fortunate
 3. Intelligent
 4. Trusted

Question ID : 65497829945
Status : Answered
Chosen Option : 4

Q.14 Select the most appropriate ANTONYM of the given word.

Monotonous

- Ans 1. Elaborate
 2. Cheerful
 3. Changing
 4. Varied

Question ID : 65497829946
Status : Answered
Chosen Option : 2

Q.15 The following sentence has been split into four segments. Identify the segment that contains a grammatical error.

Ravi told / his friends / that he would / return back soon.

- Ans 1. his friends
 2. return back soon
 3. that he would
 4. Ravi told

Question ID : 65497829954
Status : Answered
Chosen Option : 4

Q.16 Select the most appropriate word for the given group of words.

An imaginary place where everything is perfect

- Ans 1. elysium
 2. utopia
 3. eden
 4. arcadia

Question ID : 65497829943
Status : Answered
Chosen Option : 3

Q.17 Select the INCORRECTLY spelt word.

- Ans 1. Custard
 2. Costudy
 3. Cushion
 4. Curtail

Question ID : 65497829939
Status : Answered
Chosen Option : 2

Q.18 Select the most appropriate option that can substitute the underlined segment in the given sentence. If there is no need to substitute it, select 'No substitution required'.

If he works harder, he got better results.

- Ans 1. was getting
 2. is getting
 3. No substitution required
 4. will get

Question ID : 65497829938
Status : Answered
Chosen Option : 4

Q.19 Select the INCORRECTLY spelt word.

- Ans
- 1. Fasten
 - 2. Plunge
 - 3. Buisness
 - 4. Evolve

Question ID : 65497829953
Status : Answered
Chosen Option : 3

Q.20 Select the most appropriate option to fill in the blank.

The government _____ the contract for 100 low-floor buses to an automobile manufacturer.

- Ans
- 1. rewarded
 - 2. granted
 - 3. gifted
 - 4. awarded

Question ID : 65497829941
Status : Answered
Chosen Option : 2

Comprehension:

In the following passage, some words have been deleted. Read the passage carefully and select the most appropriate option to fill in each blank.

On 14th April 1912, the Titanic received warnings all the day about (1)_____ icebergs. The first message was received at 9 a.m. Similar messages (2)_____. Around 9 p.m., Captain Smith (3)_____ with his second officer, before retiring for the night. They knew that on such a clear, moonless night it would be (4)_____ difficult to spot icebergs. Why did they not change the course of the ship and take the ice-free southern route? It remains one of the (5)_____ mysteries surrounding the Titanic.

SubQuestion No : 21

Q.21 Select the most appropriate option to fill in blank no. 1.

- Ans
- 1. floating
 - 2. stacking
 - 3. sinking
 - 4. soaring

Question ID : 65497829959
Status : Answered
Chosen Option : 1

Comprehension:

In the following passage, some words have been deleted. Read the passage carefully and select the most appropriate option to fill in each blank.

On 14th April 1912, the Titanic received warnings all the day about (1)_____ icebergs. The first message was received at 9 a.m. Similar messages (2)_____. Around 9 p.m., Captain Smith (3)_____ with his second officer, before retiring for the night. They knew that on such a clear, moonless night it would be (4)_____ difficult to spot icebergs. Why did they not change the course of the ship and take the ice-free southern route? It remains one of the (5)_____ mysteries surrounding the Titanic.

SubQuestion No : 22

Q.22 Select the most appropriate option to fill in blank no. 2.

- Ans 1. rejected
 2. adapted
 3. followed
 4. influenced

Question ID : 65497829960

Status : Not Answered

Chosen Option : -

Comprehension:

In the following passage, some words have been deleted. Read the passage carefully and select the most appropriate option to fill in each blank.

On 14th April 1912, the Titanic received warnings all the day about (1)_____ icebergs. The first message was received at 9 a.m. Similar messages (2)_____. Around 9 p.m., Captain Smith (3)_____ with his second officer, before retiring for the night. They knew that on such a clear, moonless night it would be (4)_____ difficult to spot icebergs. Why did they not change the course of the ship and take the ice-free southern route? It remains one of the (5)_____ mysteries surrounding the Titanic.

SubQuestion No : 23

Q.23 Select the most appropriate option to fill in blank no. 3.

- Ans 1. emigrated
 2. conferred
 3. gimmicked
 4. disunited

Question ID : 65497829961

Status : Answered

Chosen Option : 2

Comprehension:

In the following passage, some words have been deleted. Read the passage carefully and select the most appropriate option to fill in each blank.

On 14th April 1912, the Titanic received warnings all the day about (1)_____ icebergs. The first message was received at 9 a.m. Similar messages (2)_____. Around 9 p.m., Captain Smith (3)_____ with his second officer, before retiring for the night. They knew that on such a clear, moonless night it would be (4)_____ difficult to spot icebergs. Why did they not change the course of the ship and take the ice-free southern route? It remains one of the (5)_____ mysteries surrounding the Titanic.

SubQuestion No : 24

Q.24 Select the most appropriate option to fill in blank no. 4.

- Ans 1. obviously
 2. extremely
 3. dangerously
 4. automatically

Question ID : 65497829962
Status : Answered
Chosen Option : 2

Comprehension:

In the following passage, some words have been deleted. Read the passage carefully and select the most appropriate option to fill in each blank.

On 14th April 1912, the Titanic received warnings all the day about (1)_____ icebergs. The first message was received at 9 a.m. Similar messages (2)_____. Around 9 p.m., Captain Smith (3)_____ with his second officer, before retiring for the night. They knew that on such a clear, moonless night it would be (4)_____ difficult to spot icebergs. Why did they not change the course of the ship and take the ice-free southern route? It remains one of the (5)_____ mysteries surrounding the Titanic.

SubQuestion No : 25

Q.25 Select the most appropriate option to fill in blank no. 5.

- Ans 1. dishelmed
 2. declaimed
 3. resolved
 4. unsolved

Question ID : 65497829963
Status : Answered
Chosen Option : 4

Section : Part D Hindi

Q.1 सही वर्तनी वाले शब्द का चयन कीजिए।

- Ans 1. परस्परीक
 2. पारस्परीक
 3. पारस्परिक
 4. परस्परिक

Question ID : 65497829965
Status : Not Answered
Chosen Option : -

Q.2 'संकीर्ण' का विलोम शब्द होगा-

- Ans 1. विस्तीर्ण
 2. उत्तीर्ण
 3. प्रकीर्ण
 4. संकुचित

Question ID : 65497829979
Status : Not Answered
Chosen Option : -

Q.3 'मनोरथ' किसका पर्यायवाची है?

- Ans 1. लालच
 2. लक्ष्य
 3. वासना
 4. कामना

Question ID : 65497829978
Status : Not Answered
Chosen Option : -

Q.4 दिये गये वाक्य के किस भाग में त्रुटि है?

इस प्रकरण में उसके साथ उचित न्याय किया जाएगा।

- Ans 1. उचित न्याय
 2. उसके साथ
 3. इस प्रकरण में
 4. किया जाएगा।

Question ID : 65497829981
Status : Not Answered
Chosen Option : -

Q.5 'इतिहास का जानकार' वाक्यांश के लिए एक शब्द होगा-

- Ans 1. इतिहासज्ञ
 2. ऐतिहासिक
 3. पुरातात्विक
 4. प्रागैतिहासिक

Question ID : 65497829976
Status : Not Answered
Chosen Option : -

Q.6 'हवा से बार्ते करना' मुहावरे का अर्थ बताइए।

- Ans 1. पक्षियों की भाषा समझना
 2. अकेले रहना
 3. ऊँचा उड़ना
 4. तेज़ गति से चलना

Question ID : 65497829967
Status : Not Answered
Chosen Option : -

Q.7 दिए गए शब्द के समानार्थी शब्द का चयन करें।

सोना

- Ans 1. रत्नाकर
 2. हिरण्य
 3. कलत्र
 4. ललाम

Question ID : 65497829971
Status : Not Answered
Chosen Option : -

Q.8 दिये गये वाक्य में रेखांकित अंश को प्रतिस्थापित करने के लिए सबसे उपयुक्त विकल्प का चयन करें।

मैं दो घंटे से आपकी प्रतीक्षा देख रहा हूँ।

- Ans 1. कर रहा हूँ।
 2. खा रहा हूँ।
 3. सुन रहा हूँ।
 4. गुन रहा हूँ।

Question ID : 65497829974
Status : Not Answered
Chosen Option : -

Q.9 दिये गये वाक्य के किस भाग में त्रुटि है?

अगामी सोमवार से परीक्षा शुरू होगी।

- Ans 1. सोमवार से
 2. शुरू होगी।
 3. अगामी
 4. परीक्षा

Question ID : 65497829977
Status : Not Answered
Chosen Option : -

Q.10 खूब लड़ी मदर्नी वो तो _____ थी।

रिक्त स्थान की पूर्ति कीजिए।

- Ans
- 1. रानी पद्मावती
 - 2. अनसूया
 - 3. अहल्या
 - 4. झाँसी वाली रानी

Question ID : 65497829975
Status : Not Answered
Chosen Option : -

Q.11 सही वर्तनी वाले शब्द का चयन कीजिए।

- Ans
- 1. शष्ठ
 - 2. षष्ठ
 - 3. षष्ट
 - 4. शष्ट

Question ID : 65497829964
Status : Not Answered
Chosen Option : -

Q.12 'पौ बारह होना' मुहावरे का सही अर्थ क्या है?

- Ans
- 1. खूब लाभ होना
 - 2. बहुत नुकसान होना
 - 3. घमंड करना
 - 4. आश्चर्यचकित होना

Question ID : 65497829980
Status : Not Answered
Chosen Option : -

Q.13 दिए गए वाक्य में रेखांकित खंड को प्रतिस्थापित करने के लिए सबसे उपयुक्त विकल्प का चयन करें। यदि इसे प्रतिस्थापित करने की आवश्यकता नहीं है, तो विकल्प 'किसी बदलाव की आवश्यकता नहीं है' का चयन करें।

मैं निश्चय रूप से नहीं कह सकता कि वह कब आएगा।

- Ans
- 1. किसी बदलाव की आवश्यकता नहीं है।
 - 2. निश्चय स्वरूप से नहीं कह सकता
 - 3. निश्चित रूप से नहीं कह सकता
 - 4. निश्चित रूप में नहीं कह सकता

Question ID : 65497829972
Status : Not Answered
Chosen Option : -

Q.14 दिये गये वाक्यांश के लिए एक शब्द दीजिये।

मृग जैसी आँखों वाली स्त्री

- Ans 1. मृगनयनी
 2. हिरनचक्षु
 3. मृगया
 4. मृगमुखी

Question ID : 65497829969
Status : Not Answered
Chosen Option : -

Q.15 रिक्त स्थान को भरने के लिए सबसे उपयुक्त शब्द का चयन करें।

मनोरंजन भी जीवन के लिए उतना ही _____ है, जितना अध्ययन।

- Ans 1. प्रतिबंधित
 2. शानदार
 3. आवश्यक
 4. अनावश्यक

Question ID : 65497829968
Status : Not Answered
Chosen Option : -

Q.16 दिए गए वाक्य में रेखांकित खंड को प्रतिस्थापित करने के लिए सबसे उपयुक्त विकल्प का चयन करें। यदि इसे प्रतिस्थापित करने की आवश्यकता नहीं है, तो विकल्प 'किसी बदलाव की आवश्यकता नहीं है' का चयन करें।

अपने परिवार की गरिमा का ध्यान रखना।

- Ans 1. गरिमा का ध्यान रखना।
 2. गरीमा का ध्यान रखना।
 3. गरीमा का ध्यान रखना।
 4. किसी बदलाव की आवश्यकता नहीं है।

Question ID : 65497829966
Status : Not Answered
Chosen Option : -

Q.17 'रिक्त' का विलोम शब्द होगा-

- Ans 1. अधूरा
 2. अतिरिक्त
 3. पूर्ण
 4. अपूर्ण

Question ID : 65497829982
Status : Not Answered
Chosen Option : -

Q.18 दिए गए वाक्य का वह भाग ज्ञात करें जिसमें कोई त्रुटि है। यदि कोई त्रुटि नहीं है, तो 'कोई त्रुटि नहीं है' चुनें।

वैसा ही (1)/ उच्चारण हमें हिन्दी (2)/ में भी करनी चाहिए (3)/ कोई त्रुटि नहीं है (4)

- Ans
- 1. 1
 - 2. 3
 - 3. 2
 - 4. 4

Question ID : 65497829970
Status : Not Answered
Chosen Option : -

Q.19 नीचे दिए वाक्य में रिक्त-स्थान भरने के लिए सबसे उपयुक्त शब्द का चयन करें।

मुर्गा सुबह-सुबह _____ देता है।

- Ans
- 1. कूकडूँ
 - 2. दहाड़
 - 3. बाँग
 - 4. टर्

Question ID : 65497829973
Status : Not Answered
Chosen Option : -

Q.20 'जो केंद्र की ओर उन्मुख होता हो' वाक्यांश के लिए एक शब्द होगा-

- Ans
- 1. केन्द्रापसारी
 - 2. विकेन्द्रीय
 - 3. केन्द्रीय
 - 4. केन्द्राभिसारी

Question ID : 65497829983
Status : Not Answered
Chosen Option : -

Comprehension:

जैसे ज्ञान का संशोधन और परिष्कार विज्ञान के (1)_____ द्वारा होता है, उसी प्रकार मनुष्य के स्वभाव का (2)_____ कलाओं के द्वारा किया जाता है। केवल ज्ञान की उन्नति और परिष्कार को अपना ध्येय बना लेने के कारण मनुष्य की (3)_____ शक्तियां बढ़ तो बहुत गयी हैं, लेकिन कलाओं की (4)_____ कर देने से हमें उनकी केवल दाहकता ही नसीब हो रही है। कलाहीनता मनुष्य को जड़ बना देती है और सचमुच ही आज का मनुष्य चारों ओर से अपनी ही (5)_____ का शिकार हो रहा है।

उपरोक्त गद्यांश के आधार पर निम्न प्रश्नों के उत्तर दीजिए।

SubQuestion No : 21

Q.21 गद्यांश के रिक्त स्थान (1) के लिए सर्वाधिक उपयुक्त शब्द होगा-

- Ans 1. उपकरणों
 2. प्रयोगों
 3. यंत्रों
 4. उद्योगों

Question ID : 65497829985

Status : Not Answered

Chosen Option : -

Comprehension:

जैसे ज्ञान का संशोधन और परिष्कार विज्ञान के (1)_____ द्वारा होता है, उसी प्रकार मनुष्य के स्वभाव का (2)_____ कलाओं के द्वारा किया जाता है। केवल ज्ञान की उन्नति और परिष्कार को अपना ध्येय बना लेने के कारण मनुष्य की (3)_____ शक्तियां बढ़ तो बहुत गयी हैं, लेकिन कलाओं की (4)_____ कर देने से हमें उनकी केवल दाहकता ही नसीब हो रही है। कलाहीनता मनुष्य को जड़ बना देती है और सचमुच ही आज का मनुष्य चारों ओर से अपनी ही (5)_____ का शिकार हो रहा है।

उपरोक्त गद्यांश के आधार पर निम्न प्रश्नों के उत्तर दीजिए।

SubQuestion No : 22

Q.22 गद्यांश के रिक्त स्थान (2) के लिए सर्वाधिक उपयुक्त शब्द होगा-

- Ans 1. विकास
 2. हास
 3. परिष्कार
 4. उत्थान

Question ID : 65497829986

Status : Not Answered

Chosen Option : -

Comprehension:

जैसे ज्ञान का संशोधन और परिष्कार विज्ञान के (1)_____ द्वारा होता है, उसी प्रकार मनुष्य के स्वभाव का (2)_____ कलाओं के द्वारा किया जाता है। केवल ज्ञान की उन्नति और परिष्कार को अपना ध्येय बना लेने के कारण मनुष्य की (3)_____ शक्तियां बढ़ तो बहुत गयी हैं, लेकिन कलाओं की (4)_____ कर देने से हमें उनकी केवल दाहकता ही नसीब हो रही है। कलाहीनता मनुष्य को जड़ बना देती है और सचमुच ही आज का मनुष्य चारों ओर से अपनी ही (5)_____ का शिकार हो रहा है।

उपरोक्त गद्यांश के आधार पर निम्न प्रश्नों के उत्तर दीजिए।

SubQuestion No : 23

Q.23 गद्यांश के रिक्त स्थान (3) के लिए सर्वाधिक उपयुक्त शब्द होगा-

- Ans 1. मानसिक
 2. सामाजिक
 3. आर्थिक
 4. शारीरिक

Question ID : 65497829987

Status : Not Answered

Chosen Option : -

Comprehension:

जैसे ज्ञान का संशोधन और परिष्कार विज्ञान के (1)_____ द्वारा होता है, उसी प्रकार मनुष्य के स्वभाव का (2)_____ कलाओं के द्वारा किया जाता है। केवल ज्ञान की उन्नति और परिष्कार को अपना ध्येय बना लेने के कारण मनुष्य की (3)_____ शक्तियां बढ़ तो बहुत गयी हैं, लेकिन कलाओं की (4)_____ कर देने से हमें उनकी केवल दाहकता ही नसीब हो रही है। कलाहीनता मनुष्य को जड़ बना देती है और सचमुच ही आज का मनुष्य चारों ओर से अपनी ही (5)_____ का शिकार हो रहा है।

उपरोक्त गद्यांश के आधार पर निम्न प्रश्नों के उत्तर दीजिए।

SubQuestion No : 24

Q.24 गद्यांश के रिक्त स्थान (4) के लिए सर्वाधिक उपयुक्त शब्द होगा-

- Ans 1. अपेक्षा
 2. प्रशंसा
 3. उपेक्षा
 4. तुलना

Question ID : 65497829988

Status : Not Answered

Chosen Option : -

Comprehension:

जैसे ज्ञान का संशोधन और परिष्कार विज्ञान के (1)_____ द्वारा होता है, उसी प्रकार मनुष्य के स्वभाव का (2)_____ कलाओं के द्वारा किया जाता है। केवल ज्ञान की उन्नति और परिष्कार को अपना ध्येय बना लेने के कारण मनुष्य की (3)_____ शक्तियां बढ़ तो बहुत गयी हैं, लेकिन कलाओं की (4)_____ कर देने से हमें उनकी केवल दाहकता ही नसीब हो रही है। कलाहीनता मनुष्य को जड़ बना देती है और सचमुच ही आज का मनुष्य चारों ओर से अपनी ही (5)_____ का शिकार हो रहा है।

उपरोक्त गद्यांश के आधार पर निम्न प्रश्नों के उत्तर दीजिए।

SubQuestion No : 25

Q.25 गद्यांश के रिक्त स्थान (5) के लिए सर्वाधिक उपयुक्त शब्द होगा-

- Ans
- 1. शिथिलता
 - 2. निष्क्रियता
 - 3. सक्रियता
 - 4. जड़ता

Question ID : 65497829989

Status : Not Answered

Chosen Option : -