

**JIPMER-02-06-2019-Evening**  
**ENGLISH and Quantitative Reasoning**

---

**Directions (Qs1-5):** Read the following passage carefully and answer the questions given below

In this passage Ria and Gargi give their opinions about a new painting by Marcello Vasquez. Ria, 'The new painting is spectacular! It is certainly the best work ever completed by Marcello Vasquez. I like the new painting is large. It almost covers the entire wall! Second, the painting is expensive. Normally a painting is inexpensive. Normally, a painting like this would cost thousands of dollars. But this painting costs less than 500. Third, the painting is colourful. Red and green dominate the canvas, peppered with bright spots of yellow.

Gargi, The new painting is horrendous! Marcello Vasquez should be ashamed of his work. I haven't seen a painting this bad in a long time. I dislike the new painting for

several reasons. First, the painting is far too large. It almost covers the entire wall! I think small paintings are better than large ones. Second, the painting is inexpensive. This tells me that Vasquez must have been unable to sell the painting for a higher price. Now, he is desperate. As a result, it appears he is trying to give the painting away. Third, the painting is colourful. Although, I usually like a painting to be colourful, I strongly dislike the colours Vasquez uses. To put it plainly, the combination of red, green and yellow is ugly.

1. With respect to how they like new painting Ria and Gargi?

- (1) Agree
- (2) Strongly agree
- (3) Disagree
- (4) Strongly disagree

2. Ria and Gargi both view the new painting as

- I. Large                      II. Inexpensive              III. Colourful

Select the correct answer using the codes given below

- (1) Only I
- (2) I and II
- (3) II and III
- (4) All of these

3. In this second paragraph Gargi said it can be understood that 'desperate' belongs to which of the following word groups?

- (1) Passionate, enthusiastic, excited
- (2) Idiotic, silly, foolish
- (3) Anxious, worried, troubled
- (4) Improverished, broke, poor

4. As used in the passage, which of the following words always has/have a negative menaing?

- I. Spectacular
- II. Horrendous
- III. Inexpensive

Select the correct answer using the codes given below

- (1) Only I
- (2) Only II
- (3) II and III
- (4) All of these

5. Gargi and Ria go to see another painting. The painting is small, expensive and colourful, who would probably like this painting.

- (1) Ria
- (2) Gargi
- (3) Both Ria and Gargi
- (4) Neither Ria nor Gargi

**Directions (Qs 6-7):** Each of the following questions consist of a word, followed by four words or group of words. Select the antonym of the word given below.

6. Expansion
- (1) Depression

- (2) Negligent
- (3) Precise
- (4) Enlargement

7. Thrift

- (1) Parsimony
- (2) Dismantle
- (3) Prodigality
- (4) Essential

**Directions (Qs 8-10):** Choose the correct option out of four choices give below.

8. He will abide .....his friends suresh in all circumstances.

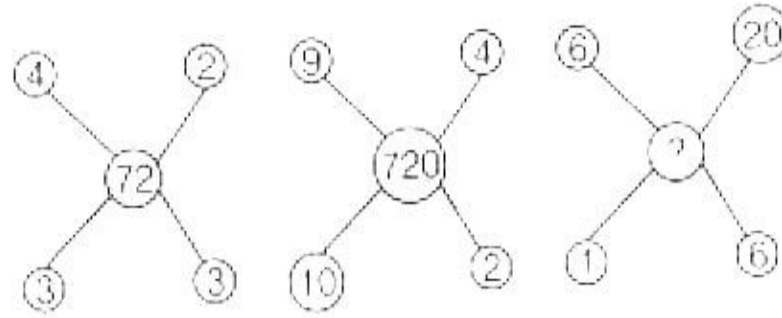
- (1) With
- (2) By
- (3) Along
- (4) To

9. He should not be blind .....the misdeeds of his son  
Rahul.
- (1) At
  - (2) To
  - (3) With
  - (4) On
10. God has destined him.....the post of Prime Minister of  
India
- (1) For
  - (2) To
  - (3) With
  - (4) On
11. In a certain code language 'SAFER' is written as  
'5@3#2' and 'RIDE' is written as '2©%#',how would  
'FEDS' be written in that code?
- (1) 3#©5
  - (2) 3@%5

(3)  $3\# \% 5$

(4)  $3\# \% 2$

12. Find the missing number from the given response.



(1) 72

(2) 720

(3) 7200

(4) 38

13. If the first and second letters in the word DEPRESSION were interchanged, also the third and fourth letters, the fifth and the sixth letters and so on, then which of the following would be seventh letter from the right.

(1) O

(2) P

(3) R

(4) S

14. Today is Thursday. The day after 59 days will be

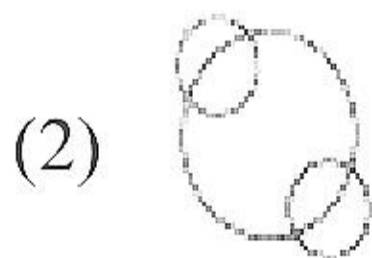
(1) Sunday

(2) Monday

(3) Tuesday

(4) Wednesday

15. Which of the following represents coal mines, factories and fields?





16. Find out the missing term in the series. 1, 8, 27, .....,125,

216

(1) 52

(2) 58

(3) 64

(4) 65

17. If '+' means 'x', '-' means '+', 'x' means '+' and '÷'

means '-' then  $6 - 9 + 8 \times 3 \div 20 = ?$


(1) -2

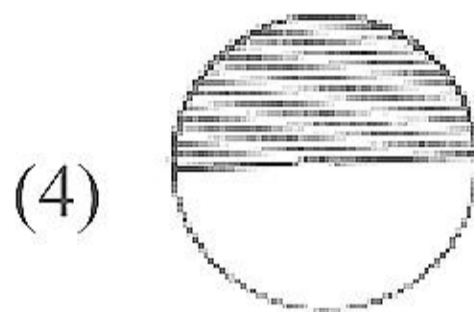


(2) 6

(3) 10

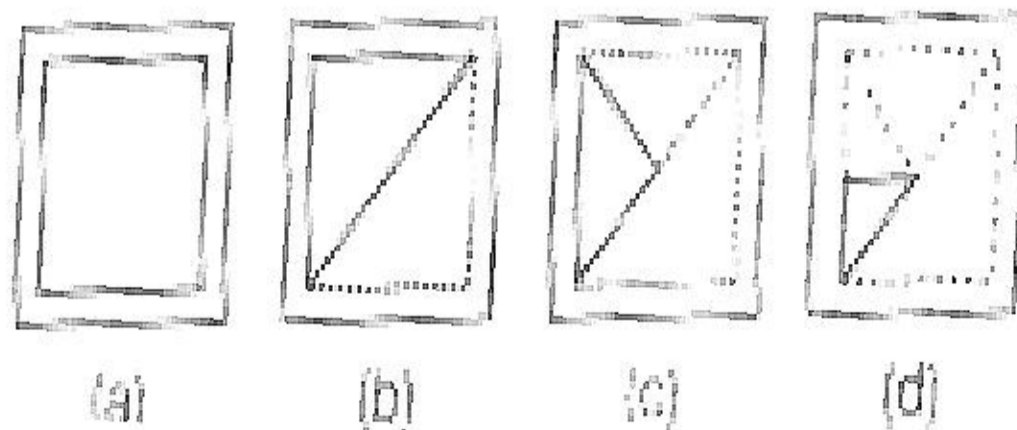
(4) 12

18. What is the water image of

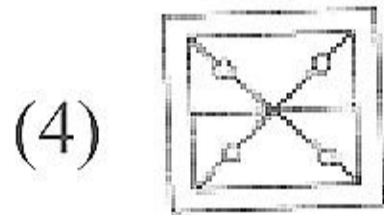
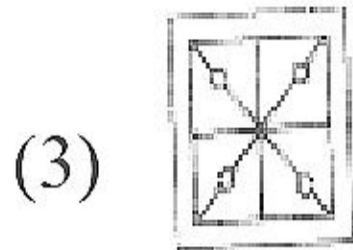
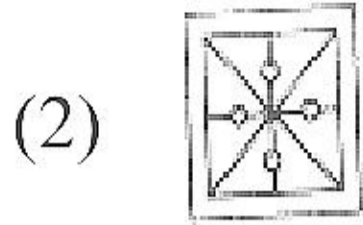
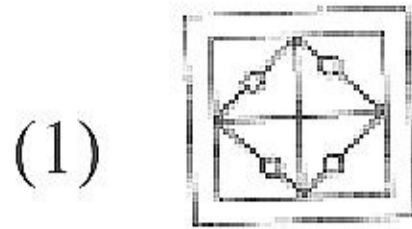




19. A piece of paper is folded and punched as shown in the figure below



How will it appear when unfolded?



20. Here are some words translated from an artificial language. Mallon piml means blue light mallon tifl means blue berry arpan tifl means rasp berry. Which word could mean 'light house'?

- (1) Tiflmallon
- (2) Pimlarpan
- (3) Mallonarpan
- (4) Pimidoken