

## POST-GRADUATE DIPLOMA IN COMPUTER APPLICATIONS

TEST CODE : DCG (Objective Type) 2016

### SYLLABUS

**Algebra** - Arithmetic, geometric and harmonic progression; Series and sequence; Permutation and combination. Binomial theorem; Theory of quadratic equations; Inequalities; Elementary set theory; Vectors and matrices; Determinant, rank and inverse of a matrix; Solution of linear equations.

**Trigonometry** - Basic concepts; Compound, multiple and submultiple angles; Inverse circular functions; Solution of trigonometric equations; Properties of triangles.

**Coordinate geometry** - Straight line; Circle; Parabola; Ellipse; Hyperbola; Tangents and normals.

**Calculus** - Taylor and Maclaurin series; Function, limit and continuity of a function of one real variable; Differentiation and integration of a function of one real variable with applications; Definite integrals; Areas using integrals; Maxima and minima, and their applications; First order differential equation in single real variable.

## SAMPLE QUESTIONS

*Note:* For each question there are four suggested answers of which only one is correct.

1. The sequence  $\frac{1}{\log_3 2}, \frac{1}{\log_6 2}, \frac{1}{\log_{12} 2}, \frac{1}{\log_{24} 2} \dots$  is in
- (A) Arithmetic progression (AP)      (B) Geometric progression (GP)  
(C) Harmonic progression (HP)      (D) None of these.

2. Let  $S = \{6, 10, 7, 13, 5, 12, 8, 11, 9\}$ , and  $a = \sum_{x \in S} (x - 9)^2$  &  
 $b = \sum_{x \in S} (x - 10)^2$ . Then

- (A)  $a < b$       (B)  $a > b$       (C)  $a = b$       (D) None of these.

3. The value of

$$\begin{vmatrix} 1+a & 1 & 1 & 1 \\ 1 & 1+b & 1 & 1 \\ 1 & 1 & 1+c & 1 \\ 1 & 1 & 1 & 1+d \end{vmatrix}$$

is

- (A)  $abcd(1 + \frac{1}{a} + \frac{1}{b} + \frac{1}{c} + \frac{1}{d})$       (B)  $abcd(\frac{1}{a} + \frac{1}{b} + \frac{1}{c} + \frac{1}{d})$   
(C)  $1 + \frac{1}{a} + \frac{1}{b} + \frac{1}{c} + \frac{1}{d}$       (D) None of these.

4. If

$$f(x) = \begin{bmatrix} \cos x & -\sin x & 0 \\ \sin x & \cos x & 0 \\ 0 & 0 & 1 \end{bmatrix},$$

then the value of  $(f(x))^2$  is

- (A)  $f(x)$       (B)  $f(2x)$       (C)  $2f(x)$       (D) None of these.

5. If  $\tan x = p+1$  and  $\tan y = p-1$ , then the value of  $2 \cot (x-y)$  is
- (A)  $2p$             (B)  $p^2$             (C)  $(p+1)(p-1)$             (D)  $\frac{2p}{p^2-1}$ .
6. The coefficient of  $x^2$  in the product  $(1+x)(1+2x)(1+3x) \cdots (1+10x)$  is
- (A) 1320            (B) 1420            (C) 1120            (D) None of these.
7. Let  $x^2 - 2(4k-1)x + 15k^2 - 2k - 7 > 0$  for any real value of  $x$ . Then the integer value of  $k$  is
- (A) 2            (B) 4            (C) 3            (D) 1.
8. Let  $S = \{0, 1, 2, \dots, 25\}$  and  $T = \{n \in S : n^2 + 3n + 2 \text{ is divisible by } 6\}$ . Then the number of elements in the set  $T$  is
- (A) 16            (B) 17            (C) 18            (D) 10.
9. The  $5000^{\text{th}}$  term of the sequence  $1, 2, 2, 3, 3, 3, 4, 4, 4, 4, \dots$  is
- (A) 98            (B) 99            (C) 100            (D) 101.
10. Let  $a$  be the 81-digit number of which all the digits are equal to 1. Then the number  $a$  is,
- (A) divisible by 9 but not divisible by 27  
 (B) divisible by 27 but not divisible by 81  
 (C) divisible by 81  
 (D) None of the above.

11. Let two systems of linear equations be defined as follows:

$$P : \begin{cases} x + y = 1 \\ 3x + 3y = 3 \\ 5x + 5y = 5 \end{cases} \quad \text{and} \quad Q : \begin{cases} x + y = 3 \\ 2x + 2y = 4 \\ 5x + 5y = 12 \end{cases} .$$

Then,

- (A)  $P$  and  $Q$  are inconsistent
- (B)  $P$  and  $Q$  are consistent
- (C)  $P$  is consistent but  $Q$  is inconsistent
- (D) None of the above.

12. The highest power of 3 contained in  $1000!$  is

- (A) 198
- (B) 891
- (C) 498
- (D) 292.

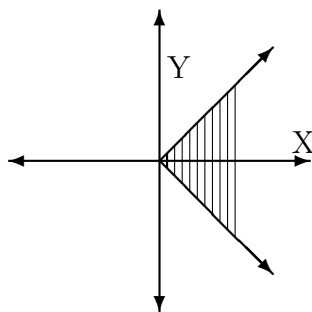
13. For all the natural number  $n \geq 3$ ,  $n^2 + 1$  is

- (A) divisible by 3
- (B) not divisible by 3
- (C) divisible by 9
- (D) None of these.

14. For natural numbers  $n$ , the inequality  $2^n > 2n + 1$  is valid when

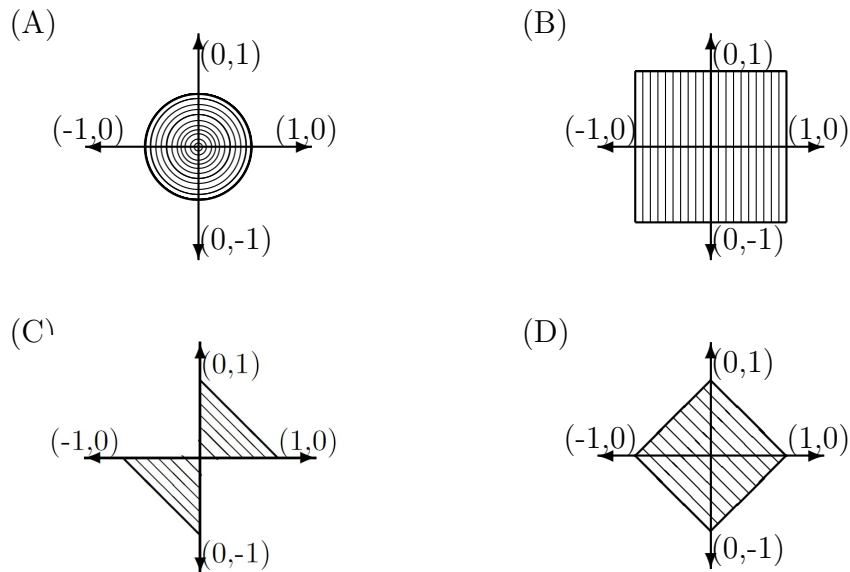
- (A)  $n \geq 3$
- (B)  $n < 3$
- (C)  $n = 3$
- (D) None of these.

15. The shaded region in the following diagram represents the relation



- (A)  $y \leq x$       (B)  $|y| \leq |x|$       (C)  $y \leq |x|$       (D)  $|y| \leq x$ .

16. The set  $\{(x, y) : |x| + |y| \leq 1\}$  is represented by the shaded region in



17. The smallest integer  $n$  for which  $1 + 2 + 2^2 + 2^3 + 2^4 + \dots + 2^n$  exceeds 9999, given that  $\log_{10} 2 = 0.30103$ , is

- (A) 12      (B) 13      (C) 14      (D) None of these.

18. The value of  $(1.1)^{10}$  correct to 4 decimal places is

- (A) 2.4512      (B) 1.9547      (C) 2.5937      (D) 1.4512.

19. The expression  $3^{2n+1} + 2^{n+2}$  is divisible by 7 for

- (A) all positive integer values of  $n$
- (B) all non-negative integer values of  $n$
- (C) only even integer values of  $n$
- (D) only odd integer values of  $n$ .

20. The total number of factors of 3528 greater than 1 but less than 3528 is

- (A) 35            (B) 36            (C) 34            (D) None of these.

21. The value of the term independent of  $x$  in the expansion of  $(1 - x)^2 \left(x + \frac{1}{x}\right)^7$  is

- (A) -70            (B) 70            (C) 35            (D) None of these.

22. The value of

$$\begin{vmatrix} 1 & \log_x y & \log_x z \\ \log_y x & 1 & \log_y z \\ \log_z x & \log_z y & 1 \end{vmatrix}$$

is

- (A) 0            (B) 1            (C) -1            (D) None of these.

23. The value of  $\log_2 e - \log_4 e + \log_8 e - \log_{16} e + \log_{32} e - \dots$  is

- (A) -1            (B) 0            (C) 1            (D) None of these.

24. If the letters of the word COMPUTER be arranged in random order, the number of arrangements in which the three vowels O, U and E occur together is

- (A) 8!            (B) 6!            (C) 3!6!            (D) None of these.

25. If  $\alpha$  and  $\beta$  be the roots of the equation  $x^2 + 3x + 4 = 0$ , then the equation with roots  $(\alpha + \beta)^2$  and  $(\alpha - \beta)^2$  is
- (A)  $x^2 + 2x + 63 = 0$  (B)  $x^2 - 63x + 2 = 0$   
 (C)  $x^2 - 2x - 63 = 0$  (D) None of the above.
26. If  $r$  be the ratio of the roots of the equation  $ax^2 + bx + c = 0$ , then
- (A)  $\frac{r}{b} = \frac{r+1}{ac}$  (B)  $\frac{r+1}{b} = \frac{r}{ac}$  (C)  $\frac{(r+1)^2}{r} = \frac{b^2}{ac}$  (D)  $(\frac{r}{b})^2 = \frac{r+1}{ac}$ .
27. If  $A$  be the set of triangles in a plane and  $R^+$  be the set of all positive real numbers, then the function  $f : A \rightarrow R^+$ , defined by  $f(x) = \text{area of triangle } x$ , is
- (A) *one-one* and *into* (B) *one-one* and *onto*  
 (C) *many-one* and *onto* (D) *many-one* and *into*
28. If one root of a quadratic equation  $ax^2 + bx + c = 0$  be equal to the  $n$ -th power of the other, then
- (A)  $(ac)^{\frac{n}{n+1}} + b = 0$   
 (B)  $(ac)^{\frac{n+1}{n}} + b = 0$   
 (C)  $(ac^n)^{\frac{1}{n+1}} + (a^n c)^{\frac{1}{n+1}} + b = 0$   
 (D)  $(ac^{\frac{1}{n+1}})^n + (a^{\frac{1}{n+1}}c)^{n+1} + b = 0$ .
29. The condition that ensures that the roots of the equation  $x^3 - px^2 + qx - r = 0$  are in H.P. is
- (A)  $r^2 - 9pqr + q^3 = 0$  (B)  $27r^2 - 9pqr + 3q^3 = 0$   
 (C)  $3r^3 - 27pqr - 9q^3 = 0$  (D)  $27r^2 - 9pqr + 2q^3 = 0$ .

30. Let  $p, q, r, s$  be real numbers such that  $pr = 2(q + s)$ . Consider the equations  $x^2 + px + q = 0$  and  $x^2 + rx + s = 0$ . Then

- (A) at least one of the equations has real roots.
- (B) both these equations have real roots.
- (C) neither of these equations have real roots.
- (D) given data is not sufficient to arrive at any conclusion.

31. Let  $A$  be an  $n \times n$  matrix such that  $|A^2| = 1$ .  $|A|$  stands for determinant of matrix  $A$ . Then

- (A)  $|A| = 1$
- (B)  $|A| = 0$  or  $1$
- (C)  $|A| = -1, 0$  or  $1$
- (D)  $|A| = -1$  or  $1$ .

32. The set of vectors constituting an orthogonal basis in  $\mathbb{R}^3$  is

- (A)  $\left\{ \begin{pmatrix} 1 \\ -1 \\ 0 \end{pmatrix}, \begin{pmatrix} 1 \\ 1 \\ 0 \end{pmatrix}, \begin{pmatrix} 0 \\ 0 \\ 1 \end{pmatrix} \right\}$
- (B)  $\left\{ \begin{pmatrix} \frac{1}{\sqrt{2}} \\ \frac{1}{\sqrt{2}} \\ 0 \end{pmatrix}, \begin{pmatrix} 0 \\ 1 \\ 0 \end{pmatrix}, \begin{pmatrix} 0 \\ 0 \\ 1 \end{pmatrix} \right\}$
- (C)  $\left\{ \begin{pmatrix} \frac{1}{\sqrt{2}} \\ \frac{1}{\sqrt{2}} \\ 0 \end{pmatrix}, \begin{pmatrix} -\frac{1}{\sqrt{2}} \\ \frac{1}{\sqrt{2}} \\ 0 \end{pmatrix} \right\}$
- (D) None of these.

33. Suppose  $A$  and  $B$  are orthogonal  $n \times n$  matrices. Which of the following is also an orthogonal matrix? Assume that  $O$  is the null matrix of order  $n \times n$  and  $I$  is the identity matrix of order  $n$ .

- (A)  $AB - BA$
- (B)  $\begin{pmatrix} A & O \\ O & B \end{pmatrix}$
- (C)  $\begin{pmatrix} A & I \\ I & B \end{pmatrix}$
- (D)  $A^2 - B^2$ .

34. Let  $A_{ij}$  denote the minors of an  $n \times n$  matrix  $A$ . What is the relationship between  $|A_{ij}|$  and  $|A_{ji}|$ ?



- (A) They are always equal.
- (B)  $|A_{ij}| = -|A_{ji}|$  if  $i \neq j$ .
- (C) They are equal if  $A$  is a symmetric matrix.
- (D) If  $|A_{ij}| = 0$  then  $|A_{ji}| = 0$ .

35. Let  $A, B$  and  $C$  be three non empty sets. Consider the two relations given below:

$$A - (B - C) = (A - B) \cup C \quad (1)$$

$$A - (B \cup C) = (A - B) - C \quad (2)$$

- (A) Both (1) and (2) are correct.
- (B) (1) is correct but (2) is not.
- (C) (2) is correct but (1) is not.
- (D) Both (1) and (2) are incorrect.

36. Suppose  $X$  and  $Y$  are finite sets, each with cardinality  $n$ . The number of bijective functions from  $X$  to  $Y$  is

- (A)  $n^n$                       (B)  $n \log_2 n$                       (C)  $n^2$                       (D)  $n!$ .

37. Suppose  $f_\alpha : [0, 1] \rightarrow [0, 1]$ ,  $-1 < \alpha < \infty$  is given by

$$f_\alpha(x) = \frac{(\alpha + 1)x}{\alpha x + 1}.$$

Then  $f_\alpha$  is

- (A) A bijective (*one-one* and *onto*) function.
- (B) A surjective (*onto*) function.
- (C) An injective (*one-one*) function.
- (D) We can not conclude about the type.

38. The length of the chord on the straight line  $3x - 4y + 5 = 0$  intercepted by the circle passing through the points  $(1, 2)$ ,  $(3, -4)$



44. If the distance between the foci of a hyperbola is 16 and its eccentricity is  $\sqrt{2}$ , then the equation of the hyperbola is

(A)  $y^2 - x^2 = 32$  (B)  $x^2 - y^2 = 16$

(C)  $y^2 - x^2 = 16$  (D)  $x^2 - y^2 = 32$ .

45. The value of  $\lim_{x \rightarrow 0} \frac{\tan^2 x - x \tan x}{\sin x}$  is

(A)  $\frac{\sqrt{3}}{2}$  (B)  $\frac{1}{2}$  (C) 0 (D) None of these.

46. Let  $I = \int (\sin x - \cos x)(\sin x + \cos x)^3 dx$  and  $K$  be a constant of integration. Then the value of  $I$  is

(A)  $(\sin x + \cos x)^4 + K$  (B)  $(\sin x + \cos x)^2 + K$

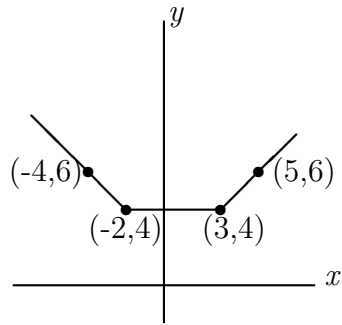
(C)  $-\frac{1}{4}(\sin x + \cos x)^4 + K$  (D) None of these.

47. The Taylor series expansion of  $f(x) = \ln(1 + x^2)$  about  $x = 0$  is

(A)  $\sum_{n=1}^{\infty} (-1)^n \frac{x^n}{n}$  (B)  $\sum_{n=1}^{\infty} (-1)^{n+1} \frac{x^{2n}}{n}$

(C)  $\sum_{n=1}^{\infty} (-1)^{n+1} \frac{x^{2n+1}}{n+1}$  (D)  $\sum_{n=0}^{\infty} (-1)^{n+1} \frac{x^{n+1}}{n+1}$ .

48. The piecewise linear function for the following graph is



$$\begin{array}{ll}
 \text{(A) } f(x) = \begin{cases} = x, & x \leq -2 \\ = 4, & -2 < x < 3 \\ = x + 1, & x \geq 3 \end{cases} & \text{(B) } f(x) = \begin{cases} = x - 2, & x \leq -2 \\ = 4, & -2 < x < 3 \\ = x - 1, & x \geq 3 \end{cases} \\
 \text{(C) } f(x) = \begin{cases} = 2x, & x \leq -2 \\ = x, & -2 < x < 3 \\ = x + 1, & x \geq 3 \end{cases} & \text{(D) } f(x) = \begin{cases} = 2 - x, & x \leq -2 \\ = 4, & -2 < x < 3 \\ = x + 1, & x \geq 3 \end{cases}
 \end{array}$$

49.  $\lim_{x \rightarrow 1} \frac{x^{\frac{1}{3}} - 1}{x^{\frac{1}{4}} - 1}$  equals

- (A)  $\frac{4}{3}$       (B)  $\frac{3}{4}$       (C) 1      (D) None of these.

50. The domain of the function  $\ln(3x^2 - 4x + 5)$  is

- (A) set of positive real numbers  
 (B) set of real numbers  
 (C) set of negative real numbers  
 (D) set of real numbers larger than 5.

51. Four squares of sides  $x$  cm each are cut off from the four corners of a square metal sheet having side 100 cm. The residual sheet is then folded into an open box which is then filled with a liquid costing Rs.  $x^2$  per  $\text{cm}^3$ . The value of  $x$  for which the cost of filling the box completely with the liquid is maximized, is

- (A) 100      (B) 50      (C) 30      (D) 10.

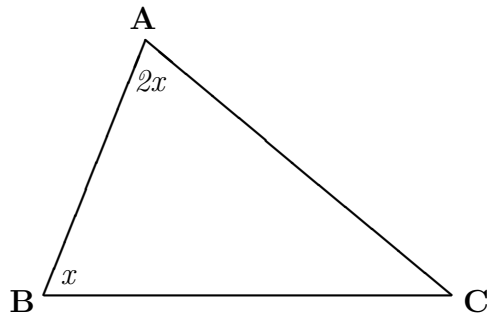
52. The area bounded by  $y = x^2 - 4$ ,  $y = 0$  and  $x = 4$  is
- (A)  $\frac{64}{3}$                       (B) 6                      (C)  $\frac{16}{3}$                       (D)  $\frac{32}{3}$ .
53.  $\lim_{x \rightarrow -1} \frac{1 + \sqrt[3]{x}}{1 + \sqrt[5]{x}}$  equals
- (A)  $\frac{3}{5}$                       (B)  $\frac{5}{3}$                       (C) 1                      (D)  $\infty$ .
54.  $\lim_{x \rightarrow 0} x \sin\left(\frac{1}{x}\right)$  equals
- (A) -1                      (B) 0                      (C) 1                      (D) Does not exist.
55.  $\lim_{x \rightarrow 0} \sin\left(\frac{1}{x}\right)$  equals
- (A) -1                      (B) 0                      (C) 1                      (D) Does not exist.
56.  $\lim_{x \rightarrow \infty} \left(1 + \frac{1}{x^2}\right)^x$  equals
- (A) -1                      (B) 0                      (C) 1                      (D) Does not exist.
57.  $\lim_{x \rightarrow 1} \frac{x^{16} - 1}{|x - 1|}$  equals
- (A) -1                      (B) 0                      (C) 1                      (D) Does not exist.
58. Let  $y = [x]$ , where  $[x]$  is greatest integer less than or equal to  $x$ .  
Then

- (A)  $y$  is continuous and *many-one*.
- (B)  $y$  is not differentiable and *many-one*.
- (C)  $y$  is not differentiable.
- (D)  $y$  is differentiable and *many-one*.

59. If in a  $\triangle ABC$ ,  $\angle B = \frac{2\pi}{3}$ , then  $\cos A + \cos C$  lies in

- (A)  $[-\sqrt{3}, \sqrt{3}]$
- (B)  $(-\sqrt{3}, \sqrt{3})$
- (C)  $(\frac{3}{2}, \sqrt{3})$
- (D)  $(\frac{3}{2}, \sqrt{3}]$ .

60. Which of the following relations is true for the following figure?



- (A)  $b^2 = c(c + a)$
- (B)  $c^2 = a(a + b)$
- (C)  $a^2 = b(b + c)$
- (D) All of these.

61. The value of  $\sin^6 \frac{\pi}{81} + \cos^6 \frac{\pi}{81} - 1 + 3 \sin^2 \frac{\pi}{81} \cos^2 \frac{\pi}{81}$  is

- (A)  $\tan^6 \frac{\pi}{81}$
- (B) 0
- (C) -1
- (D) None of these.

62. The number of values of  $x$  for which the equation  $\cos x = \sqrt{\sin x} - \frac{1}{\sqrt{\sin x}}$  is satisfied is

- (A) 1
- (B) 2
- (C) 3
- (D) more than 3.



$y = 10$  for  $x = 0$ , its solution is

(A)  $x^2 + (y - 5)^2 = 25$

(B)  $x^2 + y^2 = 100$

(C)  $(x - 5)^2 + y^2 = 125$

(D)  $(x - 5)^2 + (y - 5)^2 = 50.$

70. Water pours into a rectangular tank of 20 *metres* depth which was initially half-filled. The rate at which the height of the water rises is inversely proportional to the height of the water at that instant. If the height of the water after an hour is observed to be 12 *metres*, how much time, in hours, will be required to fill up the tank?

(A)  $\frac{75}{11}$

(B)  $\frac{125}{11}$

(C)  $\frac{25}{3}$

(D) 5.

—×—