


















Practice, Learn and Achieve
Your Goal with Prepp

NABARD Grade A

Memory Based Paper (English)

Simplifying
Government Exams

 SSC CHSL	 IAS EXAM	 RRB NTPC	 NTSE	 CDS
 SSC CGL	 CBSE UGC NET	 IBPS PO	 NDA	
 SBI PO	 IBPS CLERK	 AFCAT	 SSC JE	 CTET
 CSIR UGC NET	 CAPF	 IBPS RRB		

www.prepp.in

200 Questions

Que. 1 **Directions:** Study the following information and answer the question given below:

In a State Public Service Commission, eight exams were conducted for the post of Forest Officer, College Lecturer, Assistant Statistical Officer, Agriculture Officer, Pharmacist, I Grade Teacher, II Grade Teacher, III Grade Teacher on the 15th and 20th of January, February, March, and April but not necessarily in the same order. Eight persons Rajat, Rajesh, Ram, Raman, Ranjan, Ratan, Ritesh, and Rishi were the incharge of these eight exams but not necessarily in the same order.

Ratan was the incharge of the Agriculture Officer exam and four exams were scheduled after the Agricultural Officer exam. Two exams were scheduled between exams under the charge of Ratan and Rajat. Rishi was the incharge of the exam scheduled on the 20th of a month, but after the exam under the charge of Ratan. The exam for the post of Forest Officer was scheduled on the 15th of March. III Grade Teacher exam was conducted immediately before II Grade Teacher exam. The Assistant Statistical Officer exam was under the charge of Rishi but was not conducted immediately after the Forest Officer exam. Ritesh was the incharge of the College Lecturer exam and was scheduled in the month of April. Rajat was neither the incharge of III Grade Teacher nor I Grade Teacher. Ranjan was the incharge of the exam scheduled on the 20th of the month but after II Grade teacher exam. Rajesh was the incharge of an exam conducted after the Agriculture Officer. The pharmacist exam was scheduled before the Agriculture Officer exam. Raman was not incharge of the exam scheduled immediately after the Pharmacist exam.

When was College Lecturer exam scheduled?

1. 15 April
2. 20 February
3. 15 January
4. 20 April
5. 15 February

Testbook Solution Correct Option - 1

Que. 2 Who was the incharge of I Grade Teacher exam?

1. Rajat
2. Ranjan
3. Ritesh
4. Rishi
5. Ram

Testbook Solution Correct Option - 2

Que. 3 When was the exam under the charge of Ram scheduled?

1. 15th February
2. 20th April
3. 20th February
4. 20th January
5. 15th March

Testbook Solution Correct Option - 4

Que. 4 Who is incharge of the exam scheduled on 15 March?

1. Ritesh
2. Ram
3. Rajesh
4. Ranjan
5. Raman

Testbook Solution Correct Option - 3

Que. 5 **Direction:** In the question below are given three statements followed by two conclusions numbered I and II. You have to take the given statements to be true even if they seem to be at variance with commonly known facts. Read all the conclusions and then decide which of the given conclusions logically follows from the given statements disregarding commonly known facts

Statements:

Only a few Bottles is Cup

Some Cup is Spoon

Some Spoon is Caps

Conclusions:

I. Some Bottles is not Cup

II. All Caps is Spoon

1. Only I follow
2. Only II follow
3. Either I or II follows
4. Neither I nor II follows
5. Both I and II follows

Testbook Solution Correct Option - 1

Que. 6 **Direction:** In the question below are given three statements followed by two conclusions numbered I and II You have to take the given statements to be true even if they seem to be at variance with commonly known facts. Read all the conclusions and then decide which of the given conclusions logically follows from the given statements disregarding commonly known facts.

Statements:

Only a few Ice is Cube.

Some Cube is Circle.

Some Circle are Square.

Conclusions:

I. Some Ice is not Cube.

II. Some Cube is Square.

1. Only I follow
2. Only II follow
3. Both I and II follow
4. Either I or II follows
5. Neither I nor II follows

Testbook Solution Correct Option - 1

Que. 7 **Direction:** In the question below are given three statements followed by two conclusions numbered I and II. You have to take the given statements to be true even if they seem to be at variance with commonly known facts. Read all the conclusions and then decide which of the given conclusions logically follows from the given statements disregarding commonly known facts.

Statements:

Some orange is tomato

Only a few tomato is apple

All apple is lemon

Conclusions:

I. Some lemon is orange

II. Some tomato is not apple

1. Only I follows
2. Only II follows
3. Either I or II follows
4. Neither I nor II follows
5. Both I and II follows

Testbook Solution Correct Option - 2

Que. 8 **Direction:** Study the following information carefully to answer the given questions:

Eight persons M, N, O, P, Q, R, S and T live on different floors of a building. The bottommost floor is numbered as 1, floor above it as 2 and so on. P lives three floors above M, who lives just above Q. O lives two floors above N, who does not live on even numbered floor. P does not live on topmost floor. R lives above S, who does not live on bottommost floor.

Who lives on bottommost floor?

1. O
2. R
3. T
4. M
5. S

Testbook Solution Correct Option - 3

Que. 9 How many persons live above S's floor?

1. Five
2. Four
3. Two
4. Three
5. One

Testbook Solution Correct Option - 2

Que. 10 How many persons live between P's and T's floor?

1. Four
2. Three

3. Two
4. Five
5. One

Testbook Solution Correct Option - 1

Que. 11 Who lives three floors below O?

1. S
2. P
3. R
4. O
5. M

Testbook Solution Correct Option - 1

Que. 12 **Directions:** Study the information given below carefully and answer the questions that follow.

In a town, there are ten houses E, F, G, H, I, J, K, L, M, and N. G is 10km north of E and F is 2km east of E. J is 10km south of I and L is 2km west of M. K is 4km east of E. H is 7km west of F while I is 12km south of G. L is 12km south of F and N is 5km north of F.

N is in which direction and what distance with respect to L?

1. North, 17 km
2. South, 15 km
3. East, 5 km
4. West, 10 km
5. North, 10 km

Testbook Solution Correct Option - 1

Que. 13 What is the distance between G and J?

1. 10 km
2. 20 km
3. 22 km
4. 15 km
5. 21 km

Testbook Solution Correct Option - 3

Que. 14 What is direction of M with respect to E?

1. North-South
2. South-East
3. South-West
4. North-West
5. East

Testbook Solution Correct Option - 2

Que. 15 **Direction:** Study the following information carefully and answer the question given below.

There are eight members in the family - F, J, M, P, R, U, W and X. P is the father-in-law of U. U is the mother of F and the only child of X. J is the husband of X. M is the brother of F. F is the son of W. R is the mother of W.

How many female members are there in the family?

1. Two
2. Three
3. Four
4. Five
5. Either four or five

Testbook Solution Correct Option - 2

Que. 16 How is F related to J?

1. Grandson
2. Brother
3. Nephew
4. Son
5. Father

Testbook Solution Correct Option - 1

Que. 17 **Directions:** Study the information carefully and answer the questions given below.

Eight persons Anil, Dolly, Bina, Girish, Chetan, Esha, Falak and Hitesh are sitting around a square table but not necessarily in the same order. Four persons sit at the corner side of the table while other four sit at the middle side of the table. The persons who sit at the corner face inside while others face outside. They also have different ages i.e. 15 years, 17 years, 13 years, 18 years, 24 years, 22 years, 23 years and 28 years but not necessarily in the same order. Falak sits second to the left of Anil and second to the right of the person whose age is 23 years. Dolly sits third to the left of the person whose age is 13 years and faces outside. Neither Falak nor the persons whose age is 23 years is an immediate neighbour of Chetan. Bina sits immediate to the left of Falak and his age is 24 years who sits opposite to the one whose age is 22 years. Esha sits second to the left of the person whose age is 5 years less than the age of Chetan's age. Chetan's age is an even number and Esha sits at the corner side of the table. Hitesh is five years elder to Girish. Age of Girish is 25 years less than the total age of Anil and Esha.

Who sits second to the right of the one whose age is 5 years less than the age of Chetan?

1. Dolly
2. The one who is 22 years old
3. Anil
4. Hitesh
5. Falak

Testbook Solution Correct Option - 3

Que. 18 The sum of the ages of which of the following pairs is exactly the same?

1. Bina, Chetan & Anil, Esha
2. Dolly, Hitesh & Bina, Chetan
3. Falak, Girish & Anil, Esha

4. Falak, Girish & Bina, Esha
5. None of these

Testbook Solution Correct Option - 2

Que. 19 Who among the following sits fourth to the right of Anil?

1. Hitesh
2. Esha
3. Girish
4. Bina
5. Falak

Testbook Solution Correct Option - 2

Que. 20 Who among the following sits immediately to the left of Bina?

1. The person who is 23 years old
2. Dolly
3. The person who is 17 years old
4. The person who is 13 years old
5. None of these

Testbook Solution Correct Option - 3

Que. 21 Arrange the sentences in the correct order and answer the following questions.

A. Over the past year, perceptions of relative U.S. economic power have declined in many of America's key trading partners and allies.

B. Following the onset of the financial crisis nearly a decade ago, Europeans increasingly named China, rather than the U.S., as the world's leading economic power.

C. This year, however, the pattern has reversed itself again, and in countries such as Germany, the United Kingdom, and Spain, China is once more seen as occupying the top spot.

D. But in recent years, as the American economy slowly recovered, the pendulum began to swing back in the direction of the U.S.

E. The trend can be seen in several European countries, where views about the economic balance of power have fluctuated in recent years.

Which of the following is the **FIRST** statement?

1. A
2. B
3. C
4. D
5. E

Testbook Solution Correct Option - 1

Que. 22 Which of the following is the **SECOND** statement?

1. A
2. B

3. C
4. D
5. E

Testbook Solution Correct Option - 5

Que. 23 Which of the following is the **THIRD** statement?

1. A
2. B
3. C
4. D
5. E

Testbook Solution Correct Option - 2

Que. 24 Which of the following is the **FOURTH** statement?

1. A
2. B
3. C
4. D
5. E

Testbook Solution Correct Option - 4

Que. 25 Which of the following is the **FIFTH** statement?

1. A
2. B
3. C
4. D
5. E

Testbook Solution Correct Option - 3

Que. 26 **Fill in the blanks with the most appropriate word from among the given options**

The artist's _____ design blended pieces from several different cultural collections.

1. Trained
2. Integrative
3. Irrational
4. Paralegal
5. Grandee

Testbook Solution Correct Option - 2

Que. 27 **Each of the following sentences has a blank space and five words are given below. Click on the word which you consider the most APPROPRIATE to fit the blank.**

This push to _____ the nation's congested public spaces was sparked by the coronavirus disease.

1. conserve

2. congest
3. cooperate
4. rehabilitate
5. redesign

Testbook Solution Correct Option - 5

Que. 28 Each of the following sentences has a blank space and five words are given below. Click on the word which you consider the most APPROPRIATE to fit the blank.

Day by day there is a growing _____ between the rich and poor.

1. disparity
2. tenure
3. disability
4. disillusion
5. discrepancy

Testbook Solution Correct Option - 1

Que. 29 The following question consists of a single sentence with one blank only. You are given five words as answer choice and from the five choices, you have to pick one correct answer, which will make the sentence meaningfully complete.

A _____ of scientists now agree that the 'ozone hole' developed over Antarctica is due to the greatly increased use of Chlorofluorocarbons.

1. group
2. creed
3. majority
4. range
5. band

Testbook Solution Correct Option - 3

Que. 30 Choose an appropriate word from the options to suitably fill the blank in the sentence below so that the sentence makes sense, both grammatically and contextually.

The murder _____ of Agatha Christie have made her the best-selling novelist in the world.

1. Mystery
2. Mysteries
3. Puzzled
4. Poems
5. Plotted

Testbook Solution Correct Option - 2

Que. 31 Directions: In the following sentence, 4 words are given in bold. Two or more of these words are incorrectly placed and need to be interchanged. If there is no need for interchanging then 'No Error' can be selected.

Louisiana communities **faced(A)** by Hurricane Ida **battered(B)** a new danger as they began the **repairing(C)** task of clearing debris and **massive(D)** damage from the storm.

1. CDBA
2. ABDC
3. BADC
4. BACD
5. No error

Testbook Solution Correct Option - 3

Que. 32 Directions: In the following sentence, 4 words are given in bold. Two or more of these words are incorrectly placed and need to be interchanged. If there is no need for interchanging then 'No Error' can be selected.

China's Tianwen-1 Mars mission will be **disruption (A)** for about 50 days from mid-September due to an expected **inactivated(B)** of its **communication(C)** with Earth **caused(D)** by the solar electromagnetic radiation.

1. BACD
2. ABDC
3. ACBD
4. BCDA
5. No error

Testbook Solution Correct Option - 1

Que. 33 Directions: In the following questions, a sentence is given with five words marked as (A), (B), (C), (D) & (E). These words may or may not be placed in their places. Four options with different arrangements of these words are given. Mark the option with the correct arrangement as the answer. If there is no change required, mark 'No rearrangement required' as your answer.

Sport brings **country (A)** and **natural (B)** from across the **witness (C)** and the globe together—tennis, as a sport, has a **communities (D)** social distancing — so it's great to **people (E)** it back in action.

1. DEABC
2. CEDAB
3. BADCE
4. DABCE
5. No Rearrangement Required

Testbook Solution Correct Option - 1

Que. 34 Directions: In the following questions, a sentence is given with five words marked as (A), (B), (C), (D) & (E). These words may or may not be placed in their places. Four options with different arrangements of these words are given. Mark the option with the correct arrangement as the answer. If there is no change required, mark 'No rearrangement required' as your answer.

Matched (A) Andre Agassi his all-time **opponent (B)** **favourite (C)** on the court, Paes says that their styles of play always **calling (D)** up against each other over **decades. (E)**

1. BADEC
2. DCBAE
3. CEDAB
4. EDACB
5. No Rearrangement Required

Testbook Solution Correct Option - 2

Que. 35 Directions: In the following questions, a sentence is given with five words marked as (A), (B), (C), (D) & (E). These words may or may not be placed in their places. Four options with different arrangements of these words are given. Mark the option with the correct arrangement as the answer. If there is no change required, mark 'No rearrangement required' as your answer.

One of the most decorated (A) sportsmen (B) in the country, and greatest doubles players in the history(C) of tennis, Leander Paes has seen (D) it all during his inspirational career that goes back over three decades.(E)

1. AEDBC
2. EDCBA
3. DEBCA
4. CADBE
5. No Rearrangement Required

Testbook Solution Correct Option - 5

Que. 36 In the following passage, some of the words have been left out. Read the passage carefully and select the correct answer for the given blanks out of the given alternatives.

When we exercise, our muscles process insulin and absorb the resulting glucose as energy. Reduce that energy expenditure and your muscles will adapt physiologically to become a little less insulin sensitive, says John Thyfault, a researcher at the University of Kansas. Losing insulin sensitivity means your body converts sugar into fat rather than using it as energy to power your movements. And while that ___(1)___ helped our hunter-gatherer ancestors survive a feast-or-famine lifestyle, it's bad news for the modern desk jockey, because improper regulation of insulin can ___(2)___ your cells to store some of what's not used in muscle movement as fat. This change puts you at greater risk for the foundation of other conditions, such as Type 2 diabetes and inflammation. Thankfully, your body can adapt pretty quickly to increased insulin sensitivity with just a little bit of exercise and healthier eating. High-volume and high-intensity exercise can be equally effective at making your body more sensitive. Just a 30-minute walk or a ten-minute HIIT regimen a few times a week will ___(3)___ for keeping your body eagerly processing insulin. You're going to get small and it'll happen fast. The ___(4)___ gains you made from a lifting routine will ___(5)___ within a week of quitting the weights. But smaller doesn't mean weaker.

Which of the following words fits the blank labelled as (1)?

1. Impediment
2. Discreet
3. Vie
4. Adaptation
5. Congregation

Testbook Solution Correct Option - 4

Que. 37 Which of the following words fits the blank labelled as (2)?

1. Prompt
2. Elusive
3. Cavort
4. Diminish
5. Elope

Testbook Solution Correct Option - 1

Que. 38 Which of the following words fits the blank labelled as (3)?

1. Entice
2. Fustian
3. Suffice
4. Break
5. Devour

Testbook Solution Correct Option - 3

Que. 39 Which of the following words fits the blank labelled as (4)?

1. Malice
2. Menial
3. Visible
4. Plausible
5. Abstract

Testbook Solution Correct Option - 3

Que. 40 Which of the following words fits the blank labelled as (5)?

1. Enhance
2. Diminish
3. Encapsulate
4. Dubious
5. Tenuous

Testbook Solution Correct Option - 2

Que. 41 A sentence is given below with three words highlighted in bold. Select the option that gives the correct set of words. In case the sentence is correct, select 'No replacement required'.

Insomnia is becoming a very **stern** disease these days because of the **improving** levels of stress among the young generation due to **like** of employment opportunities.

- A. serious, increasing, lack
- B. static, impending, loss
- C. simultaneous, imploding, leave
- D. strict, improvising, lease
- E. No improvement required

1. A
2. B
3. C
4. D
5. E

Testbook Solution Correct Option - 1

Que. 42 A sentence is given below with three words highlighted in bold. Select the option that gives the correct set of words. In case the sentence is correct, select 'No replacement required'.

He was not at all ready to **except** that his father was no more although he was all **adverse** to his **advise** regarding any matter during his lifetime.

- A. accustom, antiquity, suggestions
 - B. accept, averse, advice
 - C. expect, adduce, respect
 - D. implies, attrition, recommendations
 - E. No improvement required
1. C
 2. B
 3. E
 4. A
 5. D

Testbook Solution Correct Option - 2

Que. 43 A sentence is given below with three words highlighted in bold. Select the option that gives the correct set of words. In case the sentence is correct, select 'No replacement required'.

Economic reforms need to break the grip of **defamed** capitalism through more competitive markets, a reinstated fundamental right to property, greater reliance **by** rules rather than discretion, and a change in the way government contracts are **given**.

- A. extolled, through, allotted
 - B. denounced, of, traded
 - C. stigmatized, on, awarded
 - D. vilified, upon, scored
 - E. No improvement required
1. E
 2. A
 3. C
 4. D
 5. B

Testbook Solution Correct Option - 3

Que. 44 **Directions: Read the following passage and answer the questions accordingly.**

Lunar water is water that is present on the Moon. It was first discovered by ISRO through its Chandrayaan mission. Diffuse water molecules can **persist** at the Moon's sunlit surface, as discovered by NASA's SOFIA observatory in 2020. Gradually water vapor is decomposed by sunlight, leaving hydrogen and oxygen lost to outer space. Scientists have found water ice in the cold, permanently shadowed craters at the Moon's poles. Water molecules are also in the extremely thin lunar atmosphere. Water (H₂O), and the chemically related hydroxyl group (-OH), exist in forms chemically bound as hydrates and hydroxides to lunar minerals (rather than free water), and evidence strongly suggests that this is the case in low concentrations as for much of the Moon's surface. In fact, of surface matter, adsorbed water is calculated to exist at trace concentrations of 10 to 1000 parts per million. Inconclusive evidence of free water ice at the lunar poles had accumulated during the second half of the 20th century from a variety of observations suggesting the presence of bound hydrogen. On 18 August 1976, the Soviet Luna 24 probe landed at Mare Crisium, took samples from the depths of 118, 143, and 184 cm of the lunar regolith, and then took them to Earth. In February 1978, it was published that laboratory analysis of these samples shown they contained 0.1% water by mass. Spectral measurements showed minima near 3, 5, and 6 μm, distinctive valence-vibration bands for water molecules, with intensities two or three times

larger than the noise level. On 24 September 2009, it was reported that the NASA's Moon Mineralogy Mapper (M_3) spectrometer onboard India's ISRO Chandrayaan-1 probe had detected absorption features near 2.8–3.0 μm on the surface of the Moon. But about 10 months before, on 14 November 2008, India's made Moon Impact Probe onboard Chandrayaan-1 orbiter landed into Shackleton crater and confirmed the presence of water ice. For silicate bodies, such features are typically attributed to hydroxyl- and/or water-bearing materials. In August 2018, NASA confirmed that M_3 showed water ice is present on the surface at the Moon poles. Water was confirmed to be on the sunlit surface of the Moon by ISRO on October 26, 2020. Water may have been delivered to the Moon over geological timescales by the regular bombardment of water-bearing comets, asteroids, and meteoroids or continuously produced **in situ** by the hydrogen ions (protons) of the solar wind impacting oxygen-bearing minerals. The search for the presence of lunar water has attracted considerable attention and motivated several recent lunar missions, largely because of water's usefulness in rendering long-term lunar habitation feasible.

The presence of large quantities of water on the Moon would be an important factor in rendering lunar habitation cost-effective since transporting water (or hydrogen and oxygen) from Earth would be prohibitively expensive. If future investigations find the quantities to be particularly large, water ice could be mined to provide liquid water for drinking and plant propagation, and the water could also be split into hydrogen and oxygen by solar panel-equipped electric power stations or a nuclear generator, providing breathable oxygen as well as the components of rocket fuel. The hydrogen component of the water ice could also be used to draw out the oxides in the lunar soil and harvest even more oxygen.

According to the passage, what is theory behind the presence of water on the moon's surface?

1. Water may have been delivered to the Moon over geological timescales by the regular bombardment of water-bearing comets, asteroids, and meteoroids
2. Water may have been delivered to the Moon over geological timescales by the regular bombardment of planets
3. Water may have been delivered to the Moon over geological timescales by the regular bombardment of spaceships
4. Water is stored within glasses or in voids between grains sheltered from the harsh lunar environment, thus allowing the water to remain on the lunar surface.
5. The surface of that crater is covered in glacier

Testbook Solution Correct Option - 1

Que. 45 Why is discovery of water important on the Moon's surface?

1. in rendering long-term lunar habitation feasible
2. to harvest the seeds
3. in rendering lunar habitation cost-effective
4. Both 1 and 3
5. Both 1 and 2

Testbook Solution Correct Option - 4

Que. 46 How water could also be split into hydrogen and oxygen?

1. by mining
2. by solar panel-equipped electric power stations
3. by nuclear generator
4. Both 2 and 3
5. None of the above

Testbook Solution Correct Option - 4

Que. 47 Which was the first mission to discover the lunar water?

1. Chandrayaan mission
2. NASA's SOFIA
3. Luna 24
4. Both A and B
5. Both B and C

Testbook Solution Correct Option - 1

Que. 48 According to the passage which of the following statements is correct?

1. NASA's made Moon Impact Probe onboard Chandrayaan-1 orbiter landed into Shackleton crater and confirmed the presence of water ice
2. The search for the presence of Martian water has attracted considerable attention.
3. In August 2018, ISRO confirmed that M3 showed water ice is present on the surface at the Moon poles.
4. water vapor is decomposed by sunlight
5. None of the above

Testbook Solution Correct Option - 4

Que. 49 What is the antonym of 'persist'?

1. persevere
2. continue
3. insist
4. abandon
5. endure

Testbook Solution Correct Option - 4

Que. 50 What is the meaning of 'in situ'?

1. generosity in bestowing money or gifts upon others
2. in the original place.
3. though
4. seize the day
5. for example

Testbook Solution Correct Option - 2

Que. 51 What is the full form of URL in the context of Internet?

1. Universal Resource Locator
2. Uniform Resource Locator
3. Universal Router Locator
4. Uniform Resource Location
5. None of these

Testbook Solution Correct Option - 2

Que. 52 Which options are available in the share ribbon of File Explorer in Windows 10?

1. Sorting & arranging contents of the folder
2. Adding additional panels to show a preview or details of the files
3. Verifying/modifying properties of a document
4. Print and Fax
5. Renaming a file or folder

Testbook Solution Correct Option - 4

Que. 53 What is the number of holes in VGA connector?

1. 13
2. 14
3. 15
4. 16
5. 17

Testbook Solution Correct Option - 3

Que. 54 _____ is found just above the file tab option in MS Word purpose is to provide convenient access to most commonly used commands.

1. Document area
2. Quick Access Toolbar
3. Title Bar
4. Ribbon
5. Ruler

Testbook Solution Correct Option - 2

Que. 55 In MS Excel 2013, _____ allows us to go to the last option containing data of the current row

1. Alt + Enter
2. Alt + Right Arrow
3. Ctrl + Right arrow
4. End
5. Ctrl + End

Testbook Solution Correct Option - 5

Que. 56 In Operations on a file, _____ file operations is simply deleting the file except deleting the attributes

1. Close
2. Seek
3. Delete
4. Append
5. Truncate

Testbook Solution Correct Option - 5

Que. 57 What is the length of IPv4 address?

1. 16 bit
2. 32 bit
3. 64 bit
4. 128 bit
5. 256 bit

Testbook Solution Correct Option - 2

Que. 58 Computer Network _____ is a type of device that acts as the central point among computers & other devices that are a part of the network

1. Distributor
2. USB
3. Router
4. Network Card
5. Network Cable

Testbook Solution Correct Option - 3

Que. 59 Starting a computer or a computer embedded device is called

1. Signing
2. Booting
3. Spoofing
4. Threading
5. Logging

Testbook Solution Correct Option - 2

Que. 60 Language used in the second generation computers is called as -

1. Basic
2. Pascal
3. Machine Language
4. Algol
5. Assembly Language

Testbook Solution Correct Option - 5

Que. 61 MS word Header and Footer options under which tab?

1. Mailing
2. Insert
3. File
4. Review
5. Home

Testbook Solution Correct Option - 2

Que. 62 Related to computers registers, which register holds address of instructions

1. Temporary register
2. Program counter
3. Accumulator
4. Address register
5. Data register

Testbook Solution Correct Option - 2

Que. 63 OS process management, difference between arrival time and time at which process first gets the CPU is called _____ time

1. Event
2. Burst
3. Response
4. Waist
5. Turnaround

Testbook Solution Correct Option - 5

Que. 64 Which MS excel function calculates the no of days between 2 dates?

1. Gap
2. Dates
3. Days
4. Days 360
5. SPAN

Testbook Solution Correct Option - 3

Que. 65 Create, insert and write, preview results and finish are commands found in which tab of MS word 2013?

1. Mailing tab
2. Home tab
3. Reference tab
4. Review tab
5. Page layout tab

Testbook Solution Correct Option - 1

Que. 66 A stack-based CPU organization uses _____ address instructions

1. 2
2. 0
3. 1
4. 3
5. 4

Testbook Solution Correct Option - 4

Que. 67

_____ method can make macros run automatically in MS-excel 2013, once you have done some setup for scheduling a macros.

1. Application now
2. Application offline
3. On Time
4. Uptime
5. Time zone

Testbook Solution Correct Option - 3

Que. 68 _____ type of column chart in MS-Excel 2013 is like a stacked column in that it uses a single bar for each category and subdivides that bar to show the proportion from each series?

1. 3-D column
2. Clustered
3. 3-D clustered
4. 100 % Stacked
5. Histogram

Testbook Solution Correct Option - 4

Que. 69 _____ contains the code, by executing which the CPU access the very first partition of hard disk when we turn on the computer.

1. ROM
2. DOS
3. EHD
4. DDS
5. BIOS

Testbook Solution Correct Option - 5

Que. 70 Storage capacity of a dual layered Blue ray Disk

1. 50 GB
2. 100 GB
3. 10 GB
4. 25 GB
5. 200 GB

Testbook Solution Correct Option - 1

Que. 71 **Direction:** Study the table and answer the questions given below:

The data of population of 3 towns in year 2019 is given.

Towns	Difference between Male and Female	Ratio between Male and Female
A	15,000	7 : 13
B	20,000	6 : 1

C	40,000	11 : 3
---	--------	--------

Ratio between number of females in town B and number of males in town E is 8 : 17. What is the ratio between number of males in E and number of males in A

1. 19 : 35
2. 17 : 35
3. 17 : 33
4. 13 : 35
5. 15 : 37

Testbook Solution Correct Option - 2

Que. 72 Number of females in town A is what percentage more than females in C

1. 117
2. 180
3. 42
4. 84
5. 158

Testbook Solution Correct Option - 1

Que. 73 5000 males from C work in an organization, remaining work in a farm. 20% of males in C who work in farm like coffee, remaining like tea. What is the number of males from C who work in farm and like tea?

1. 38000
2. 30000
3. 56000
4. 40000
5. None of these

Testbook Solution Correct Option - 4

Que. 74 Difference between total males in town A and C together and females in town C

1. 65700
2. 57500
3. 62100
4. 58900
5. 45300

Testbook Solution Correct Option - 2

Que. 75 Population of males in town D is 13000. Population of females is equal to average of population of males in A, B, C, D. What is the population of females in D

1. 30475
2. 27375
3. 26455

4. 28915
5. 25295

Testbook Solution Correct Option - 2

Que. 76 In 2020, Number of males in town B was 80% more than the number of females in town C in 2019. What was the percentage age increase in number of males in town B from 2019 to 2020

1. 12.5
2. 20.5
3. 8.5
4. 18.5
5. 16.5

Testbook Solution Correct Option - 1

Que. 77 In the following number series, a wrong number is given. Find out the wrong number.
74, 92, 115, 143, 176, 217, 257

1. 92
2. 74
3. 143
4. 176
5. 217

Testbook Solution Correct Option - 5

Que. 78 In the following number series, a wrong number is given. Find out the wrong number.
177, 190, 205, 224, 249, 283

1. 177
2. 205
3. 224
4. 283
5. 190

Testbook Solution Correct Option - 4

Que. 79 In the following number series, a wrong number is given. Find out the wrong number.
217, 267, 304, 330, 348, 357

1. 217
2. 267
3. 330
4. 357
5. 348

Testbook Solution Correct Option - 5

Que. 80 40 km upstream takes 3 hours 12 min. Speed of stream is 3 km/hr. Speed of boat in still water is increased by 20%, time taken to cover 54 km downstream?

1. 1 hour 30 min
2. 1 hour 20 min
3. 2 hour 30 min
4. 3 hour 15 min
5. 2 hour

Testbook Solution Correct Option - 3

Que. 81 What should come in place of question mark in the following question ?

$$74.998 + 19.99 \% \text{ of } 1650.01 \div (899.99)^{1/2} = ?$$

1. 205
2. 154
3. 86
4. 102
5. 98

Testbook Solution Correct Option - 3

Que. 82 What should come in place of question mark in the following question ?

$$864.02 \div 3.99 + 38.05 \div 18.98 \times 110.01 = ?$$

1. 330
2. 452
3. 395
4. 436
5. 334

Testbook Solution Correct Option - 4

Que. 83 What should come in place of question mark in the following question ?

$$(63.99)^{1/3} \times 124.989 + 407.05 \div 10.98 = ?$$

1. 537
2. 425
3. 754
4. 224
5. 256

Testbook Solution Correct Option - 1

Que. 84 P is 10500, SI is 12% and T is 10 years. 1/3rd of interest earned from A invested in B for 5 years. Find the amount received from B after 5 years.

1. 7240
2. 5480
3. 6720
4. 2520
5. 6250

Testbook Solution Correct Option - 3

Que. 85 Marks obtained by A, B and C is 207. A scores $\frac{3}{4}$ of B. B scores average of A, B and C Plus 3. Find the ratio of marks of A and C.

1. 4 : 5
2. 8 : 9
3. 2 : 3
4. None
5. Cannot be determined

Testbook Solution Correct Option - 3

Que. 86 Ratio of present age of Ranjan and Sanjay is 3 : 2. Sanjay's age 8 years hence will be equal to Ranjan's age 8 years ago. If Irfan is 12 years older than Sanjay, What is the present age of Irfan ?

1. 60
2. 44
3. 42
4. 32
5. 52

Testbook Solution Correct Option - 2

Que. 87 A is 120 litre of mixture of milk and water in the ratio 17 : 7. 40% is poured out and poured into vessel X. X is a 100 litre mixture of equal milk and water. Find the new ratio of milk and water.

1. 32 : 21
2. 21 : 16
3. 15 : 8
4. 25 : 14
5. 18 : 11

Testbook Solution Correct Option - 2

Que. 88 Area of rectangle is 96 square meter more than the area of triangle. Length of rectangle is 18 m. Height of triangle is 20 m. Base of triangle is equal to breadth of rectangle. Find the perimeter of rectangle

1. 60
2. 72
3. 54
4. 64
5. 48

Testbook Solution Correct Option - 1

Que. 89 A set has 5 consecutive even numbers. Square of average of last 3 numbers of the set is 420 more than the square of smallest number of the set. What is the sum of smallest and largest even numbers of the set together.

1. 74
2. 76
3. 70

4. 72
5. 78

Testbook Solution Correct Option - 4

Que. 90 Pipe A can fill a tank in 36 min and Pipe B can fill a tank in 45 min. Both pipe opened together. Pipe A is closed after x min. Total time taken to fill the tank is 30 min. Find the value of x.

1. 12 min
2. 15 min
3. 10 min
4. 24 min
5. 20 min

Testbook Solution Correct Option - 1

Que. 91 Which is a structured method of group decision making which allows a rich generation of ideas, behavioural participation of all members which reduces interaction of members at some point of stage?

1. Brainstorming
2. Delphi Technique
3. Nominal Group Technique
4. Fish Bowling
5. Consensus Mapping

Testbook Solution Correct Option - 3

Que. 92 With a view to improve the process and outcomes of future decisions, decision makers generally assess both outcome of a decision and process by which the decision has reached after _____.

1. Analyzing alternative course.
2. Decision has been made and implemented.
3. Evaluating alternative course of action.
4. Identifying alternative course of action.
5. Defining and understanding the problem.

Testbook Solution Correct Option - 3

Que. 93 Managers sometimes make decisions based on skills, knowledge and training. Such decisions are known as :

1. Value ethics based decisions
2. Experience based decisions
3. Sub - conscious mental processing
4. Cognitive based decisions
5. Environment based decisions

Testbook Solution Correct Option - 4

Que. 94 What is the individual level factor that can affect the process of decision making in an organization?

1. Personal Values

2. Economic Conditions
3. Organizational Politics
4. Organizational Policies
5. Government Legislation

Testbook Solution Correct Option - 1

Que. 95 The method using Boolean logic to determine cause of the problem in any undesirable event which involves a diagram that looks like a tree where all causes are written down as branches is :

1. Failure Mode and Effect Analysis
2. Fault Tree Analysis
3. Eight D Problem Analysis
4. Fishbone Diagram
5. Five Whys Analysis

Testbook Solution Correct Option - 2

Que. 96 When a decision making wrongly comprises of two situations because of perceived similarity or evaluates an event without comparing it to the similar situations, the tendency is known as :

1. Overconfidence Bias
2. Confirmation Bias
3. Hindsight Bias
4. Availability Bias
5. Representative Bias

Testbook Solution Correct Option - 5

Que. 97 A mental shortcut that helps us to take decisions based on the probability is known as :

1. Peak and End
2. Scarcity Heuristic
3. Working Backward
4. Base Rate
5. Affect as information

Testbook Solution Correct Option - 2

Que. 98 Which decision making technique is useful in motivating participation in group decisions and encourage all members to contribute at an individual level before being influenced by anyone else thereby leading to wide variety of ideas?

1. Cost benefit Analysis
2. Simulation Training
3. Starbursting
4. Step Ladder Technique
5. Heuristic Method

Testbook Solution Correct Option - 4

Que. 99 Tendency to maintain things as they are even when they may be significantly less than the optimal is termed as :

1. Status Quo Trap
2. Sunk Cost Trap
3. Prudence Trap
4. Anchoring Trap
5. Loss Aversion Trap

Testbook Solution Correct Option - 1

Que. 100 Leadership style where leader uses knowledge and past experience to reach a decision without seeking information from others is known as :

1. Delegating Decision Making Style
2. Directive Decision Making Style
3. Facilitative Decision Making Style
4. Conceptual Decision Making Style
5. Analytical Decision Making Style

Testbook Solution Correct Option - 2

Que. 101 As per the census 2011, what is the total literacy rate of male population?

1. 82 %
2. 80 %
3. 82.14%
4. 83 %
5. 79%

Testbook Solution Correct Option - 3

Que. 102 On which date the Bharat Series of Vehicle registration was started?

1. 15th March 2021
2. 15th October 2021
3. 15th January 2021
4. 15th September 2021
5. 15th February 2021

Testbook Solution Correct Option - 4

Que. 103 Under One District One Product, Papier Mache articles belongs to which of the following regions?

1. Kashmiri
2. Firozabadi
3. Bhagalpuri
4. Jamanagari
5. Kolhapuri

Testbook Solution Correct Option - 1

Que. 104 RBI had started Indo-Nepal remittance facility for which of the following services?

1. Real-Time Gross Settlement (RTGS)
2. Immediate Payment Service (IMPS)
3. National Electronic Funds Transfer (NEFT)
4. Unified Payments Interface
5. None of the above

Testbook Solution Correct Option - 3

Que. 105 In July 2021, the Government of India extended the duration of 'Stand Up India Scheme' up to which year?

1. 2022
2. 2023
3. 2024
4. 2025
5. 2026

Testbook Solution Correct Option - 4

Que. 106 Ravi Kumar Dahiya has become the _____ wrestler to win Olympics in wrestling

1. Second
2. Third
3. Fourth
4. Fifth
5. Sixth

Testbook Solution Correct Option - 4

Que. 107 "Mission Domination: An Unfinished Quest" is a book related to which of the following sports?

1. Football
2. Badminton
3. Golf
4. Cricket
5. Basketball

Testbook Solution Correct Option - 4

Que. 108 Which of the following ministries has launched a 100 days campaign called 'SUJALAM'?

1. Ministry of Commerce and Industry
2. Ministry of Earth Sciences
3. Ministry of Health & Family Welfare
4. Ministry of Jal Shakti
5. Ministry of New and Renewable Energy

Testbook Solution Correct Option - 4

Que. 109 Which is the space shuttle in which the Indian-born astronaut Kalpana Chawla died?

1. Columbia
2. Discovery
3. Enterprise
4. Atlantis
5. Challenger

Testbook Solution Correct Option - 1

Que. 110 What is the national tree of India?

1. Banyan tree
2. Peepal tree
3. Neem tree
4. Coconut tree
5. Mango tree

Testbook Solution Correct Option - 1

Que. 111 The World Tourism Day celebrated on which day?

1. 16th February
2. 27th September
3. 29th September
4. 27th October
5. 19th April

Testbook Solution Correct Option - 2

Que. 112 In August 2021, RBI imposed Monetary Penalty to how many White Label ATMs?

1. Two
2. Three
3. Four
4. Five
5. Six

Testbook Solution Correct Option - 3

Que. 113 The book White Mughals is written by who among the following?

1. Irfan Habib
2. William Dalrymple
3. Audrey Truschke
4. Alex Rutherford
5. None of the above

Testbook Solution Correct Option - 2

Que. 114 Which of the following grasslands are found in North America?

1. Pampas

2. Prairies
3. Down
4. Velds
5. Savanna

Testbook Solution Correct Option - 2

Que. 115 What is the height of Ain Dubai? (Dubai Eye)

1. 250 m
2. 380 m
3. 400 m
4. 500 m
5. 620 m

Testbook Solution Correct Option - 1

Que. 116 Pandit Shubhankar Banerjee passed away. He was an expert of which of the following musical instruments?

1. Guitar
2. Saxophone
3. Tabla
4. Violin
5. Trumpet

Testbook Solution Correct Option - 3

Que. 117 21.16 m sandcastle, holding the Guinness World Record, for being the tallest sandcastle, has been built in Blokhus in Denmark?

1. Hague (Netherlands)
2. Warsaw (Poland)
3. Copenhagen (Denmark)
4. Stockholm (Sweden)
5. Oslo (Norway)

Testbook Solution Correct Option - 3

Que. 118 Which of the following is an International level Indian Ornithologist and Naturalist?

1. Gilly Arjan Singh
2. Jim Corbett
3. Dr. Salim Ali
4. Kailash Sankhala
5. Sunderlal Bahuguna

Testbook Solution Correct Option - 3

Que. 119 For how much amount if PAYU acquiring Bill Desk?

1. \$4.7 bn

2. \$4.3 bn
3. \$4 bn
4. \$4.9 bn
5. \$4.6 bn

Testbook Solution Correct Option - 1

Que. 120 Kyoto Protocol, Paris Agreement are related to

1. Climate Change
2. Reintroduction of Tigers
3. Water Cleaning Campaigns
4. Education
5. Poverty Eradication

Testbook Solution Correct Option - 1

Que. 121 Which of the following dates marks the commencement of the 15th Finance Commission?

1. 1 April 2017
2. 1 March 2019
3. 1 April 2021
4. 1 January 2017
5. 1 January 2015

Testbook Solution Correct Option - 3

Que. 122 Which of the following articles of the Indian Constitution prohibits employment of children in factories?

1. Article 34
2. Article 35
3. Article 27
4. Article 24
5. Article 30

Testbook Solution Correct Option - 4

Que. 123 InvITs are registered in the form of

1. Regional Bank
2. Stock Exchange Investment Fund
3. Trusts
4. Agricultural Fund
5. None of the above

Testbook Solution Correct Option - 3

Que. 124 Retail Inflation in India is measured by which of the following indices?

1. Wholesale Price Index
2. Consumer Price Index

3. Gross Domestic Product
4. Commodity price index
5. Cost of living index

Testbook Solution Correct Option - 2

Que. 125 The difference between a country's imports of goods and services and its exports is called _____.

1. Depreciation
2. Balance of items
3. Foreign Trade
4. Balance of Trade
5. None of the above/ More than one of the above

Testbook Solution Correct Option - 4

Que. 126 How much fiscal deficit is targeted in Union Budget 2021?

1. 5.5%
2. 4.8%
3. 6.8%
4. 9%
5. 3%

Testbook Solution Correct Option - 3

Que. 127 Samagra Siksha Abhiyan was launched in which of the following year?

1. 2001-02
2. 2015-16
3. 2018-19
4. 1997-98
5. 2007-08

Testbook Solution Correct Option - 3

Que. 128 Which of the following organisation recommends the appointment of MD and CEO in public sector banks?

1. RBI
2. Bank Boards Bureau
3. State Government
4. Central Government
5. Management of concerned bank

Testbook Solution Correct Option - 2

Que. 129 The objective of PM-KUSUM Scheme is

1. to reduce farmers' dependence on monsoon for irrigation
2. to reduce farmers' dependence on moneylenders for credit

3. promotion of floriculture in India
4. to remove farmers' dependence on diesel and kerosene and to link pump sets to solar energy
5. None of the above

Testbook Solution Correct Option - 4

Que. 130 The Gross Enrolment Ratio (GER) in institutions of higher education in India is planned to increase by _____ % in 2035.

1. 23
2. 50
3. 12
4. 9
5. 10

Testbook Solution Correct Option - 2

Que. 131 Who among the following was the chairperson of the committee formed to look into the issues and concerns of Micro-Finance Institution Sector?

1. Y H Malegam
2. Mandal
3. Srikrishna
4. Pannir Selvam
5. Chakrabharthy

Testbook Solution Correct Option - 1

Que. 132 The centre will provide how many kgs of food grains free-of-cost to around 80 crore Pradhan Mantri Garib Kalyan Anna Yojana (PM-GKAY) beneficiaries during May and June 2021 amidst the second wave of COVID-19 cases?

1. 3
2. 5
3. 7
4. 9
5. 11

Testbook Solution Correct Option - 2

Que. 133 Which one of the following statements regarding Public Accounts Committee is incorrect?

1. It consists of members from Rajya Sabha only.
2. It consists of twenty members from Lok Sabha and ten members from Rajya Sabha
3. The term of members of Public Accounts Committee is five years
4. Finance Minister is the Chair-person of the Public Accounts Committee
5. None of the above/More than one of the above

Testbook Solution Correct Option - 1

Que. 134 What is the objective of UNDP Sahi Disha Campaign?

1. To provide short term crop loans at an affordable interest rates
2. To make villagers aware about cleanliness and prevention of diseases
3. To highlights issues and hurdles that impact the opportunities for women in rural India to access jobs and livelihoods
4. Reducing maternal and neonatal mortality
5. To increase the sex ratio

Testbook Solution Correct Option - 3

Que. 135 Union Budget 2021-22 was based on how many number of pillars?

1. 6
2. 7
3. 8
4. 9
5. 10

Testbook Solution Correct Option - 1

Que. 136 It is proposed to increase the limit for tax audit for persons who are undertaking _____ of their transaction digitally from Rs. 5 Crore to Rs 10 Crore.

1. 50%
2. 75%
3. 80%
4. 95%
5. 100%

Testbook Solution Correct Option - 4

Que. 137 Which of the following country is the top export destination for Indian floriculture?

1. USA
2. Germany
3. Netherlands
4. UK
5. UAE

Testbook Solution Correct Option - 1

Que. 138 Pradhan Mantri Garib Kalyan Package, PMGKP Insurance Policy claims of COVID Warriors will continue to be settled till 24 April 2021. The Insurance cover of how many rupees is provided under the PMGKP scheme?

1. 35 Lakhs
2. 40 Lakhs
3. 45 Lakhs
4. 50 Lakhs
5. 55 Lakhs

Testbook Solution Correct Option - 4

Que. 139 Which of the following is not a member of SCO?

1. Kyrgyzstan
2. Uzbekistan
3. Tajikistan
4. Afghanistan
5. Russia

Testbook Solution Correct Option - 4

Que. 140 Who is a child under Protection of Child Marriage Act?

1. a person who is still under the supervision of his parents.
2. a person who has not completed 21 years in case of male and 18 years in case of female.
3. a person under the age of 14 years.
4. a person who has not completed 17 years of age
5. None of the above

Testbook Solution Correct Option - 2

Que. 141 National Education Policy, 2020 is based on the recommendation of which of the following committees?

1. Nagarajan Committee
2. Goswami Committee
3. Kasturirangan Committee
4. Pranav Ray Committee
5. Yashpal Committee

Testbook Solution Correct Option - 3

Que. 142 A central sector scheme of financing facility under the Agriculture Infrastructure Fund was launched in 2020. Which among the following statements is incorrect regarding the scheme?

1. It provides for medium to long term debt financing
2. All loans under this financing facility will have interest subvention of 3 per cent per annum upto a limit
3. Credit guarantee coverage will be available for eligible borrowers
4. 1 lakh crores will be provided by banks and financial institutions as loans to primary agricultural credit societies
5. It is operational from the year 2020-21 to 2028-29

Testbook Solution Correct Option - 5

Que. 143 Choose the incorrect statement regarding FAO?

1. It aims to achieve food security for all and make sure that people have regular access to enough high-quality food to lead active healthy lives.
2. India is the founding member of FAO.
3. It is headquartered in Geneva.
4. It was founded in 1945.
5. None of the above

Testbook Solution Correct Option - 3

Que. 144 Which among the following is NOT an objective of Kisan Credit Card Scheme?

1. Purchase of seeds
2. Purchase of pump sets
3. Purchase of fertilizers
4. Purchase of development
5. None of the above

Testbook Solution Correct Option - 4

Que. 145 Which of the following statements regarding PM Awas Yojana is not correct?

1. It aims to provide housing for all in urban areas by the year 2022.
2. It was launched in 2016.
3. It is Implemented by Ministry of Housing and Urban Affairs.
4. It promotes women's empowerment by providing the ownership of houses in the name of female members or in joint name.
5. None of the above

Testbook Solution Correct Option - 2

Que. 146 Which of the following is the calorie intake recommended by Ministry of labour and employment to decide minimum wages?

1. 2400
2. 2800
3. 3000
4. 1500
5. 2000

Testbook Solution Correct Option - 1

Que. 147 How much percent of their budget, states should spend on health as recommended by 15th Finance commission?

1. 5%
2. 8%
3. 14%
4. 18%
5. 21%

Testbook Solution Correct Option - 2

Que. 148 Identify the scheme and choose the correct options given below.

1. It aims at mobilizing rural poor households into Self Help Groups (SHGs) in a phased manner.
2. It involves working with community institutions through community professionals in the spirit of self-help.
3. It is a restructured version of Swarna Jayanti Gram Swarozgar Yojna.
1. Deen Dayal Antyodaya Yojana – National Rural Livelihoods Mission

2. Pradhan Mantri Gram Sadak Yojana
3. Mahatma Gandhi National Rural Employment Guarantee Act (MGNREGA) scheme
4. Deendayal Antyodaya Yojana
5. Deen Dayal Upadhyaya Grameen Kaushalya Yojana

Testbook Solution Correct Option - 1

Que. 149 Which of the following is the first river linking project of India?

1. Kosi-Mechi Link
2. Ken-Betwa Link
3. Damanganga-Pinjal
4. Par-Tapi -Narmada
5. None of the above

Testbook Solution Correct Option - 2

Que. 150 Which of the organization releases Financial Stability Report ?

1. SBI
2. RBI
3. SEBI
4. IRDA
5. PFRDA

Testbook Solution Correct Option - 2

Que. 151 The Beti Bachao, Beti Padhao (BBBP) scheme was launched to control which of the following declining options?

1. Adult Sex Ratio
2. Child Sex Ratio
3. Education level in females
4. Health issues in female child
5. None of the above

Testbook Solution Correct Option - 2

Que. 152 Which country could not become the member of ASEAN Association?

1. Thailand
2. Vietnam
3. India
4. Myanmar
5. Singapore

Testbook Solution Correct Option - 3

Que. 153 As per the eighth Schedule of the Constitution of India, how many languages are referred to as scheduled languages?

1. 18

2. 22
3. 20
4. 14
5. 8

Testbook Solution Correct Option - 2

Que. 154 Beej Bachao Andolan was launched by whom?

1. Vijay Jardhari
2. Pandurang Hegde
3. A. K. Banerjee
4. Sunder Lal Bahuguna
5. Amrita Devi Bishnoi

Testbook Solution Correct Option - 1

Que. 155 Which of the following types of MSMEs have been recently included in Priority Sector Lending Targets?

1. Rs 10 Crore
2. Rs 20 Crore
3. Rs 40 Crore
4. Rs 50 Crore
5. Rs 80 Crore

Testbook Solution Correct Option - 4

Que. 156 Consider the following statements and choose the correct options given below.

1. The objective of financial inclusion is to primarily undertake basic banking activities of acceptance of deposits and lending to un-served and underserved sections.
2. Can accept the deposit of any amount.
3. Can distribute financial services like mutual funds.
 1. Regional Rural Bank
 2. Small Finance Bank
 3. NBFC
 4. Exchange Banks
 5. None of the above

Testbook Solution Correct Option - 2

Que. 157 Which one of the following statements is *not* correct for Atal Pension Yojana?

1. There is guaranteed minimum monthly pension for the subscribers ranging between Rs. 1000 and Rs. 5000 per month
2. The benefit of minimum pension would be guaranteed by the Government of India
3. Government of India co-contributes 50% of the subscriber's contribution or Rs. 1000 per annum, whichever is lower.
4. It is applicable to all citizens of India aged above 40 years.
5. None of the above

Testbook Solution Correct Option - 4

Que. 158 Choose the correct answer regarding NIPUN Bharat Programme that is launched in July 2021?

1. NIPUN Bharat aims to cover the learning needs of children in the age group of 5 to 9 years.
2. NIPUN stands for National Initiative for Proficiency in Reading with Understanding and Numeracy
3. It is launched by Home Ministry
4. It comes under the aegis of the centrally sponsored scheme of Sukanya scheme.
5. All of the above

Testbook Solution Correct Option - 2

Que. 159 Which of the following is the objective of the EASE reforms index?

1. Performance of each Public Sector Banks
2. Performance of regional Rural Bank
3. To ease the working of Public Sector Banks
4. To measure the loan disbursement by Central Banks
5. None of the above

Testbook Solution Correct Option - 1

Que. 160 Which of the following statements is correct with respect to the New Development Bank?

1. It was established at the fourth BRICS summit in New Delhi
2. The Bank's membership is open to members of the United Nations.
3. China has the highest percentage of subscribed capital in the Bank
4. The headquarters is located in Beijing.
5. None of the above

Testbook Solution Correct Option - 2

Que. 161 As per the Emission Gap Report 2020, Largest emitter of Green House Gases (GHG) is

1. USA
2. China
3. India
4. UK
5. Saudi Arabia

Testbook Solution Correct Option - 2

Que. 162 Which of the following Indian major carp loved by the people?

1. Catla
2. Reba
3. Calbasu
4. Bata
5. None of the above

Testbook Solution Correct Option - 1

Que. 163 Potamodromous fish lived their entire lifestyle in Freshwater systems. Which of the following is Potamodromous fish?

1. Cod
2. Tuna
3. Herring
4. Catfish
5. Rohu

Testbook Solution Correct Option - 4

Que. 164 The traditional methods of processing fish by salting, drying, smoking, pickling etc. are collectively known as

1. Handling
2. Storage
3. Canning
4. Curing
5. None of the above

Testbook Solution Correct Option - 4

Que. 165 Which agroforestry system involves perennial hedges along with agricultural crop production?

1. Alley Cropping
2. The Taungya system
3. Riparian Buffer
4. Relay Cropping
5. None of the above

Testbook Solution Correct Option - 1

Que. 166 Which of the following soil has color mainly due to the diffusion of Iron oxide rather than presence of Manganese?

1. Regur Soil
2. Laterite Soil
3. Alluvial Soil
4. Yellow Soil
5. Peaty Soil

Testbook Solution Correct Option - 2

Que. 167 Which crop produce maximum residue?

1. Fruits
2. Vegetables
3. Cereals
4. Pulses
5. Sugarcane

Testbook Solution Correct Option - 3

Que. 168 Portion of soil covered with Air and Moisture is called as

1. Topsoil
2. Soil Particle
3. Soil Aggregate
4. Pore Space
5. Organic matter

Testbook Solution Correct Option - 4

Que. 169 The cultivable command area of medium irrigation project is

1. 1000 - 2000 Hectares
2. 2000 - 10000 Hectares
3. 500 - 1000 Hectares
4. 10000 - 15000 Hectares
5. 100 - 500 Hectares

Testbook Solution Correct Option - 2

Que. 170 As per NAS, the share of livestock in total GVA in 2018-19 is

1. 7.19%
2. 12.19%
3. 4.19%
4. 8.19%
5. 10.9%

Testbook Solution Correct Option - 3

Que. 171 Quincunx system of planting used for

1. Fruits
2. Vegetables
3. Cereals
4. Pulses
5. Oilseeds

Testbook Solution Correct Option - 1

Que. 172 As per 4th Handloom survey, percentage of weavers in rural areas is

1. 88.7%
2. 78.7%
3. 68.7%
4. 97.7%
5. 57.7%

Testbook Solution Correct Option - 1

Que. 173 What is minimum forest cover to be maintained as per the National forest Policy, 1988?

1. One-Half
2. One-Third
3. one-fourth
4. Two-Third
5. Three-Fourth

Testbook Solution Correct Option - 2

Que. 174 Which of the following is the objective of Atal Bhujal Yojana?

1. Drip Irrigation
2. Hydro-electric power production
3. Drinking water supply
4. Groundwater Management
5. None of the above

Testbook Solution Correct Option - 4

Que. 175 As Per Agricultural census, share of operational holding for small farmers

1. 0 - 1 ha
2. 1 - 2 ha
3. 2 - 3 ha
4. 3 - 4 ha
5. 4 - 5 ha

Testbook Solution Correct Option - 2

Que. 176 The practice of growing two or more crops together in distinct row arrangement is known as

1. Mixed Cropping
2. Crop Rotation
3. Crop Diversification
4. Intercropping
5. None of the above

Testbook Solution Correct Option - 4

Que. 177 Which of the following state is having maximum number of Farmers Producers organisations (FPO's)?

1. Bihar
2. Punjab
3. Uttar Pradesh
4. Haryana
5. Madhya Pradesh

Testbook Solution Correct Option - 1

Que. 178 Which of the following state has the maximum number of women run Self Help Groups (SHG)?

1. Bihar

2. Telangana
3. Andhra Pradesh
4. Karnataka
5. Uttar Pradesh

Testbook Solution Correct Option - 3

Que. 179 Practice of covering the soil/ground with hay, farm residue etc. to make more favorable condition for plant growth, development and efficient crop production and conserve moisture is called

1. Mulching
2. Contour bunding
3. Crop Rotation
4. Tillage
5. Green Manuring

Testbook Solution Correct Option - 1

Que. 180 Study of fruits is called as _____

1. Olericulture
2. Pomology
3. Viticulture
4. Fruitology
5. None of the above

Testbook Solution Correct Option - 2

Que. 181 National Rural Livelihood Mission(NRLM) earlier known as

1. Sampoorna Grameen Rojgar Yojana
2. Swarnajayanti Grameen Swarozagar Yojana
3. Pradhan Mantri Gramodaya Yojana
4. Rashtriya Gram Vikas Yojana
5. Pradhan Mantri Livelihood Mission

Testbook Solution Correct Option - 2

Que. 182 Which of the following has the objective of interevntion is to protect the growers of fruits and vegetables from making distress sale due to lockdown and reduce the poor-harvests losses?

1. Operation Greens
2. Operation Yellow
3. Operation Flood
4. TOP Krishi
5. TOP to Total Scheme

Testbook Solution Correct Option - 1

Que. 183 Which of the following NABARD project aimed for digitization of SHG?

1. E-Rupi

2. E-Shakti
3. E-Sampada
4. E-Kishan
5. E-Gramin

Testbook Solution Correct Option - 2

Que. 184 Which of the following Instrument use to measure relative humidity?

1. Hydrometer
2. Pyrometer
3. Hygrometer
4. Anemometer
5. Sphygmomanometer

Testbook Solution Correct Option - 3

Que. 185 Wheel hoe tool is used for

1. Winnowing
2. Ploughing
3. Weeding
4. Leveling
5. Irrigation

Testbook Solution Correct Option - 3

Que. 186 The scheme involving value addition and preservation infrastructure is to provide integrated cold chain and preservation infrastructure facilities without any break from the farm gate to the consumer. It covers the creation of infrastructure facility along the entire supply chain viz. pre-cooling, weighing, sorting, waxing facilities at farm level multi production/ multi-temperature cold storage, CA storage, Packing facility, IQF, blast freezing in the distribution hub and reefer vans, mobile cooling units for facilitating distribution of horticulture, organic product, marine, dairy, meat and poultry etc.

1. Integrated cold chain and preservation infrastructure scheme
2. Integrated cold chain and infrastructure scheme
3. Integrated cold chain and value addition infrastructure scheme
4. Integrated Value addition and preservation infrastructure scheme
5. Integrated Value addition and cold chain infrastructure scheme

Testbook Solution Correct Option - 3

Que. 187 In e-NAM, more trading is done in which commodity?

1. Fruits
2. Vegetables
3. Cereals
4. Pulses
5. All of the above

Testbook Solution Correct Option - 1

Que. 188 Hens reared for egg purpose is known as

1. chick
2. Poultry
3. Layers
4. Chicken
5. Dairy

Testbook Solution Correct Option - 3

Que. 189 Loans up to Rs. 50,000 under MUDRA yojana is termed as

1. Tarun
2. Kishor
3. Shishu
4. Arun
5. Non of the above

Testbook Solution Correct Option - 3

Que. 190 DAY-NRLM has the provision for interest subvention to cover the difference between the lending rate of bank and 7% on all credit from bank/financial institutions availed by women SHGs, for a maximum of Rs. 300,00/- SHGs. The difference between the bank lending rate and 7% for loans up to Rs. 300,00/- subject to maximum limit of

1. 5%
2. 5.5%
3. 7%
4. 7.5%
5. 10%

Testbook Solution Correct Option - 2

Que. 191 What is the electronic trading platform of ITC?

1. e-Chaupal
2. e-NAM
3. e-Rupi
4. e-Kishan
5. e-Sampda

Testbook Solution Correct Option - 1

Que. 192 Male goat capable of breeding is called as?

1. Doeling
2. Buck
3. Buckling
4. Bore
5. Doe

Testbook Solution Correct Option - 2

Que. 193 Urea has the highest content of _____ with _____ %.

1. Nitrogen, 46
2. Ammonia, 50
3. Potassium, 47
4. Phosphorus, 46
5. Sulphur, 45

Testbook Solution Correct Option - 1

Que. 194 Color of which of the following soil is red due to diffusion of iron rather than pressure of environment?

1. Laterite soil
2. Red Soil
3. Regur Soil
4. Alluvial soil
5. None of the above

Testbook Solution Correct Option - 2

Que. 195 What is the name of the indigenous major carp which is also known to be fastest growing among fin fishes?

1. Rohu
2. Catla Catla
3. Catfish
4. Prawn
5. Mrigal

Testbook Solution Correct Option - 2

Que. 196 Which of the following states has the highest number of SHGs run by women?

1. Jharkhand
2. Haryana
3. Bihar
4. Madhya Pradesh
5. Uttar Pradesh

Testbook Solution Correct Option - 3

Que. 197 Which of the following is a metal iron storage structure?

1. CAP
2. PUSA Bin
3. PAU Bin
4. Hapur Tekka
5. Hagevu

Testbook Solution Correct Option - 3

Que. 198 Haryana belong to which of the following Agro-climatic zone?

1. Western Himalayan Region
2. Lower Gangetic Plain Region
3. Upper Gangetic Plain Region
4. Trans Gangetic Plain Region
5. Middle Gangetic Plain Region

Testbook Solution Correct Option - 4

Que. 199 Which of the following method of irrigation where water is applied near root zone?

1. Sprinkle irrigation
2. Rain Gun
3. Drip irrigation
4. Ring Basin irrigation
5. None of the above

Testbook Solution Correct Option - 3

Que. 200 Which of the following is organic in nature

1. Ammonium sulphate
2. Urea
3. Cow dung
4. Super phosphate
5. All of the above

Testbook Solution Correct Option - 3



Latest Sarkari jobs, Govt Exam alerts, Results and Vacancies

- ▶ Latest News and Notification
- ▶ Exam Paper Analysis
- ▶ Topic-wise weightage
- ▶ Previous Year Papers with Answer Key
- ▶ Preparation Strategy & Subject-wise Books

To know more [Click Here](#)



www.prepp.in