

**SSC
GD**

**Previous Year Paper
22 Nov 2021 Shift 1**

Exam Date	22/11/2021
Exam Time :	9:00 AM - 10:30 AM
Subject	Constable GD 2021

Section : Part A General Intelligence and Reasoning

Q.1 Select the option that is related to the third word in the same way as the second word is related to the first word.

Bee : Buzz :: Hen : ?

- Ans
- 1. Chirp
 - 2. Cluck
 - 3. Bellow
 - 4. Squeak

Question ID : 65497834698
 Status : Answered
 Chosen Option : 2

Q.2 In a certain code language, 'RAJU' is written as 'WFOZ' and 'SITA' is written as 'XNYF'. How will 'MONU' be written in that language?

- Ans
- 1. RTSZ
 - 2. UTRZ
 - 3. SRSY
 - 4. TRSX

Question ID : 65497834695
 Status : Answered
 Chosen Option : 1

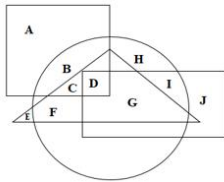
Q.3 Select the combination of letters that when sequentially placed in the blanks of the given series will complete the series.

N _ K _ T N O K _ T _ _ _ D T

- Ans
- 1. ODDNOK
 - 2. KDDNOK
 - 3. ODKNOK
 - 4. ONDNOK

Question ID : 65497834711
 Status : Answered
 Chosen Option : 1

Q.4 In the following Venn diagram, the triangle represents 'tall', the circle represents 'black eyes', the rectangle represents 'brown hair', and the square represents 'boys'. Which of the following letters represents tall boys with black eyes but NOT brown hair?



- Ans**
- 1. C
 - 2. F
 - 3. D
 - 4. G

Question ID : 65497834700
 Status : Answered
 Chosen Option : 1

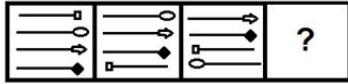
Q.5 Select the correct mirror image of the given combination when the mirror is placed at 'XX' as shown.



- Ans**
- 1. P Q R K H A
 - 2. P Q R H K A
 - 3. P Q R K H A
 - 4. P Q H K H A

Question ID : 65497834704
 Status : Answered
 Chosen Option : 3

Q.6 Select the figure from among the given options that can replace the question mark (?) in the following series.

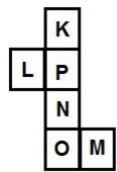


Ans

- ✗ 1.
- ✗ 2.
- ✗ 3.
- ✓ 4.

Question ID : 65497834713
 Status : Answered
 Chosen Option : 4

Q.7 A cube is made by folding the given sheet. In the cube so formed, which pair of letters will NOT be on the opposite faces?



- ✗ 1. K and N
- ✓ 2. O and M
- ✗ 3. L and M
- ✗ 4. P and O

Question ID : 65497834692
 Status : Answered
 Chosen Option : 2

Q.8 Select the option in which the given figure is embedded (rotation is NOT allowed).



Ans

✗ 1.



✓ 2.



✗ 3.



✗ 4.



Question ID : 65497834693

Status : Answered

Chosen Option : 3

Q.9 Study the given pattern carefully and select the number that can replace the question mark (?) in it.

34 38 7
46 38 5
84 ? 15

Ans ✗ 1. 83

✗ 2. 78

✓ 3. 87

✗ 4. 38

Question ID : 65497834707

Status : Not Answered

Chosen Option : --

Q.10 Four letter-clusters have been given, out of which three are alike in some manner and one is different. Select the letter-cluster that is different.

Ans ✗ 1. BEHK

✓ 2. HLOR

✗ 3. PSVY

✗ 4. KNQT

Question ID : 65497834701

Status : Answered

Chosen Option : 2

Q.11 In a certain code language, 'DICTIONARY' is coded as '20' and 'MOBILITY' is coded as '16'. How will 'TERMINATION' be coded in that language?

- Ans
- 1. 20
 - 2. 18
 - 3. 22
 - 4. 24

Question ID : 65497834702
Status : Not Answered
Chosen Option : --

Q.12 Select the number from among the given options that can replace the question mark (?) in the following series.

345, 334, 320, 303, 283, 260, ?

- Ans
- 1. 221
 - 2. 212
 - 3. 208
 - 4. 234

Question ID : 65497834712
Status : Answered
Chosen Option : 4

Q.13 Select the option that is related to the fourth number in the same way as the first number is related to the second number and the fifth number is related to the sixth number.

64 : 4 :: ? : 6 :: 100 : 5

- Ans
- 1. 108
 - 2. 188
 - 3. 228
 - 4. 144

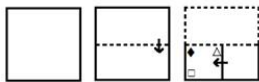
Question ID : 65497834690
Status : Answered
Chosen Option : 1

Q.14 Eight friends, P, Q, R, S, T, U, V and W, are watching a movie sitting in a line. T is sitting at one of the corners. Q is sitting between W and R. V is sitting between S and U. W is sitting to the immediate right of T. R is sitting to the immediate left of P. There are two persons between P and U. Who is sitting at the other corner?

- Ans
- 1. U
 - 2. P
 - 3. R
 - 4. S

Question ID : 65497834689
Status : Not Answered
Chosen Option : --

Q.15 The sequence of folding a piece of paper and the manner in which the folded paper has been cut is shown in the following figures. How would this paper look when unfolded?



Ans

- ✓ 1.
- ✗ 2.
- ✗ 3.
- ✗ 4.

Question ID : 65497834709

Status : Answered

Chosen Option : 1

Q.16 Select the correct option that indicates the arrangement of the given words in the order in which they appear in an English dictionary.

1. Durable
2. Duty
3. Dubious
4. Duster
5. Dustbin

- Ans**
- ✗ 1. 3, 5, 1, 4, 2
 - ✗ 2. 1, 3, 5, 4, 2
 - ✗ 3. 3, 1, 4, 5, 2
 - ✓ 4. 3, 1, 5, 4, 2

Question ID : 65497834710

Status : Answered

Chosen Option : 1

Q.17 In a certain code language, 'LEMON' is written as 'ELMNO'. How will 'CLUSTER' be written in that language?

- Ans**
- ✓ 1. CELRSTU
 - ✗ 2. CLESRUT
 - ✗ 3. LUCETRS
 - ✗ 4. LCUTESR

Question ID : 65497834705

Status : Answered

Chosen Option : 4

Q.18 Select the option that is related to the third letter-cluster in the same way as the second letter-cluster is related to the first letter-cluster.

DKLH : GPSQ :: FRLP : ?

Ans 1. IWSY

2. JWRY

3. JWSY

4. IWRZ

Question ID : 65497834694

Status : Answered

Chosen Option : 1

Q.19 Read the given statements and conclusions carefully. Assuming that the information given in the statements is true, even if it appears to be at variance with commonly known facts, decide which of the given conclusions logically follow(s) from the statements.

Statements:

All enzymes are vitamins.

All vitamins are carbohydrates.

Conclusions:

I. All enzymes are carbohydrates.

II. No enzyme is a carbohydrate.

Ans 1. Both conclusions I and II follow

2. Either conclusion I or II follows

3. Only conclusion II follows

4. Only conclusion I follows

Question ID : 65497834706

Status : Answered

Chosen Option : 4

Q.20 There are six persons, M, N, P, Q, R and S, in a family. S is the paternal grandmother of M. P is the sister of R. N is the father of P. M is the only son of Q and R. N does not have any married daughter. How is M related to N?

Ans 1. Father

2. Brother

3. Grandson

4. Son

Question ID : 65497834696

Status : Answered

Chosen Option : 3

Q.21 Which two signs should be interchanged to make the given equation correct?

$$5 - 24 + 17 \times 16 \div 4 = 133$$

Ans 1. + and +

2. × and –

3. × and +

4. + and ×

Question ID : 65497834691

Status : Answered

Chosen Option : 2

Q.22 Select the number from among the given options that can replace the question mark (?) in the following series.

4, 5, 18, 19, 68, 69, ?

- Ans
- 1. 256
 - 2. 250
 - 3. 262
 - 4. 266

Question ID : **65497834703**
Status : **Not Answered**
Chosen Option : --

Q.23 A fruit shop consists of only two types of fruits namely oranges and mangoes. The number of oranges is three times the number of mangoes. Which of the following numbers CANNOT represent the total number of fruits in the shop?

- Ans
- 1. 44
 - 2. 42
 - 3. 48
 - 4. 40

Question ID : **65497834708**
Status : **Answered**
Chosen Option : 2

Q.24 Select the letter-cluster from among the given options that can replace the question mark (?) in the following series.

PEA, SJH, VOO, YTV, ?

- Ans
- 1. YBC
 - 2. CYB
 - 3. BYC
 - 4. CBY

Question ID : **65497834697**
Status : **Answered**
Chosen Option : 3

Q.25 Five friends, Bhumika, Rashi, Shweta, Vibha and Arunima, are sitting in a row facing east. Bhumika is sitting between Vibha and Shweta. Rashi is second to the left of Shweta. Who is sitting at the south end?

- Ans
- 1. Arunima
 - 2. Rashi
 - 3. Shweta
 - 4. Vibha

Question ID : **65497834699**
Status : **Answered**
Chosen Option : 2

Section : **Part B General Knowledge and General Awareness**

Q.1 In which year did Motilal Nehru chair the committee to prepare the Constitution of India?

- Ans
- 1. 1944
 - 2. 1928
 - 3. 1934
 - 4. 1939

Question ID : **65497834721**
Status : **Answered**
Chosen Option : 1

Q.2 Who among the following was the first Indian actor to be made a Chevalier of the Ordre des Arts et des Lettres?

- Ans
- 1. Sivaji Ganesan
 - 2. Rajnikanth
 - 3. Rajesh Khanna
 - 4. Dilip Kumar

Question ID : **65497834717**
Status : **Not Answered**
Chosen Option : --

Q.3 Which among the following is NOT a human capital?

- Ans
- 1. Health care
 - 2. Education
 - 3. Training
 - 4. Land

Question ID : **65497834718**
Status : **Answered**
Chosen Option : 4

Q.4 In which year was Communist Party of India formed?

- Ans
- 1. 1940
 - 2. 1943
 - 3. 1927
 - 4. 1925

Question ID : **65497834719**
Status : **Not Answered**
Chosen Option : --

Q.5 The highest peak of Arunachal Pradesh state is _____.

- Ans
- 1. Kamet
 - 2. Trisuli
 - 3. Kangto
 - 4. Nun-Kun

Question ID : **65497834723**
Status : **Answered**
Chosen Option : 1

Q.6 Where was the SAFF Women's Championship 2019 held?

- Ans 1. Nepal
 2. Bhutan
 3. India
 4. Bangladesh

Question ID : 65497834724
Status : Answered
Chosen Option : 3

Q.7 Who was the winner of the Jnanpith award in the year 2019?

- Ans 1. Shankha Ghosh
 2. Bhalchandra Nemade
 3. Akkitham Achuthan Namboothiri
 4. Chandrashekhara Kambara

Question ID : 65497834729
Status : Not Answered
Chosen Option : --

Q.8 Which of the following countries hosted the 16th G20 Summit in 2021?

- Ans 1. Japan
 2. Saudi Arabia
 3. Italy
 4. India

Question ID : 65497834722
Status : Answered
Chosen Option : 3

Q.9 What do you call the process of change in the base pair sequence of an organism?

- Ans 1. Pollination
 2. Decantation
 3. Mutation
 4. Ionisation

Question ID : 65497834716
Status : Answered
Chosen Option : 3

Q.10 Robert Hooke discovered the cell in 1665 by observing a _____ under a microscope.

- Ans 1. leaf
 2. grain of sand
 3. rock
 4. piece of cork

Question ID : 65497834736
Status : Answered
Chosen Option : 4

Q.11 Which newspaper edited by Bal Gangadhar Tilak, was one of the strongest critics of the British rule?

Ans 1. Amrita Bazar Patrika

2. Kesari

3. The Tribune

4. The Hindu

Question ID : 65497834735

Status : Answered

Chosen Option : 2

Q.12 Who among the following was an eminent scholar of Sanskrit, Hindi and Rajasthani beside Persian, Arabic and Turki?

Ans 1. Abdul Rahim Khan-i-Khanan

2. Birbal

3. Akbar

4. Ras Khan

Question ID : 65497834727

Status : Answered

Chosen Option : 1

Q.13 Who among the following Indian cricketers bowled 14 overs with a bandage around his fractured jaw against the West Indies at Antigua in 2002?

Ans 1. Harbhajan Singh

2. Ishant Sharma

3. Zaheer Khan

4. Anil Kumble

Question ID : 65497834733

Status : Answered

Chosen Option : 4

Q.14 In which of the following years was the Gajapati kingdom of Orissa established?

Ans 1. 1567

2. 1336

3. 1467

4. 1435

Question ID : 65497834720

Status : Answered

Chosen Option : 1

Q.15 When did Cyclone Amphan hit India?

Ans 1. March 2020

2. April 2020

3. June 2020

4. May 2020

Question ID : 65497834728

Status : Answered

Chosen Option : 3

Q.16 Which of the following Tiger Reserves was granted the 'Conservation Assured Tiger Standards' status in July 2021?

- Ans
- 1. Ranthambore Tiger Reserve
 - 2. Corbett Tiger Reserve
 - 3. Mudumalai Tiger Reserve
 - 4. Bandhavgarh Tiger Reserve

Question ID : 65497834738
Status : Answered
Chosen Option : 1

Q.17 Which of the following is NOT a cause of food and water contamination?

- Ans
- 1. Chemical runoff from factories
 - 2. Incorrect food storage
 - 3. Infectious organisms in the atmosphere
 - 4. Bites by stray animals

Question ID : 65497834715
Status : Answered
Chosen Option : 3

Q.18 हड़प्पा स्थल पर _____ में हलरेखाओं (Furrow) के निशान खोजे गए थे।

- Ans
- 1. लोथल
 - 2. कालीबंगा
 - 3. बनवाली
 - 4. धोलावीरा

Question ID : 65497834737
Status : Answered
Chosen Option : 4

Q.19 Under which Article of the Constitution of India shall the Governor of a State be appointed by the President by warrant under his hand and seal?

- Ans
- 1. Article 153
 - 2. Article 154
 - 3. Article 156
 - 4. Article 155

Question ID : 65497834725
Status : Not Answered
Chosen Option : --

Q.20 In which year was the Hindu Succession Act of 1956 amended to give equal right to father's property to daughters?

- Ans
- 1. 2005
 - 2. 2007
 - 3. 2001
 - 4. 2010

Question ID : 65497834734
Status : Not Answered
Chosen Option : --

Q.21 Which of the following is NOT an age-verification test method that makes an assessment based on hand and wrist radiographs?

- Ans
- 1. The Tanner-Whitehouse method
 - 2. The Greulich-Pyle method
 - 3. The FELS method
 - 4. The cervical vertebral maturation method

Question ID : **65497834726**
Status : **Answered**
Chosen Option : **4**

Q.22 The Hundru falls are formed by the river _____.

- Ans
- 1. Umngot
 - 2. Subarnarekha
 - 3. Tsangpo
 - 4. Teesta

Question ID : **65497834732**
Status : **Not Answered**
Chosen Option : **--**

Q.23 Which of the following is NOT a service provided to its clients by banks in India?

- Ans
- 1. ECS
 - 2. RTGS
 - 3. NEFT
 - 4. URL

Question ID : **65497834731**
Status : **Answered**
Chosen Option : **4**

Q.24 Who among the following players did NOT win a gold medal at the Alexis Valentine International Boxing Tournament held in Nantes, France 2020?

- Ans
- 1. Ashish Kumar
 - 2. Sanjeet
 - 3. Amit Panghal
 - 4. Sumit Sangwan

Question ID : **65497834730**
Status : **Not Answered**
Chosen Option : **--**

Q.25 Which of the following is a sword dance meant to depict the martial art tradition of the Kumaoni tribe?

- Ans
- 1. Kachchhi Ghodi
 - 2. Gair
 - 3. Chholiya
 - 4. Chari

Question ID : **65497834714**
Status : **Answered**
Chosen Option : **2**

Q.1 If the radius of the base of a cylinder is increased by 20% and its height is decreased by $33\frac{1}{3}\%$, then what will be the change in percentage in its volume?

- Ans**
- 1. Decrease by 0.4%
 - 2. Increase by 2%
 - 3. Decrease by 4%
 - 4. Decrease by 2%

Question ID : **65497834758**
Status : **Not Answered**
Chosen Option : --

Q.2 A train travelling at a speed of 45 km/h crosses a house in 12 sec. What is the length of the train?

- Ans**
- 1. 150 m
 - 2. 10 m
 - 3. 230 m
 - 4. 180 m

Question ID : **65497834754**
Status : **Answered**
Chosen Option : 1

Q.3 The compound interest (in ₹, nearest to a rupee) on a sum of ₹7,500 at 24% p.a. for 3 months, interest compounded monthly, is:

- Ans**
- 1. 459
 - 2. 439
 - 3. 303
 - 4. 465

Question ID : **65497834757**
Status : **Answered**
Chosen Option : 1

Q.4 If $(a + b - c) : (b + c - a) : (a + c - b) = 4 : 5 : 9$, then $a - b : c - b : c - a =$

- Ans**
- 1. 4 : 1 : 5
 - 2. 5 : 1 : 4
 - 3. 1 : 4 : 5
 - 4. 4 : 5 : 1

Question ID : **65497834743**
Status : **Not Answered**
Chosen Option : --

Q.5 A mixture contains alcohol and water in the ratio of 3 : 4. On adding 8 litres of water, the ratio of alcohol to water becomes 5 : 8. The original quantity of the mixture (in litres) is:

- Ans**
- 1. 70
 - 2. 63
 - 3. 35
 - 4. 84

Question ID : 65497834756
Status : Answered
Chosen Option : 2

Q.6 X takes twice as much time as Y and thrice as much time as Z to finish a job. Working all together, they can finish it in 2 days. Y alone can finish the job in:

- Ans**
- 1. 14 days
 - 2. 10 days
 - 3. 12 days
 - 4. 6 days

Question ID : 65497834753
Status : Answered
Chosen Option : 4

Q.7 An iron is bought for ₹210. Decide its MRP so that after a discount of 5%, you still gain 90%.

- Ans**
- 1. ₹385.50
 - 2. ₹524
 - 3. ₹630
 - 4. ₹420

Question ID : 65497834751
Status : Answered
Chosen Option : 4

Q.8 The average of the marks scored by Amit in 5 subjects is 72. If the average of the marks scored in 3 of these subjects is 70, then what is the average of the marks in the remaining subjects?

- Ans**
- 1. 25
 - 2. 75
 - 3. 50
 - 4. 71

Question ID : 65497834740
Status : Answered
Chosen Option : 2

Q.9 Four numbers are in the ratio 2 : 3 : 5 : 7 and their HCF is 6. What is the sum of the squares of the largest and the smallest numbers?

- Ans**
- 1. 486
 - 2. 324
 - 3. 54
 - 4. 1908

Question ID : 65497834739
Status : Answered
Chosen Option : 4

Q.10 If P is 220% of Q, then what percentage of P + Q will Q be?

- Ans**
- 1. 37%
 - 2. 48.15%
 - 3. 31.25%
 - 4. 25%

Question ID : 65497834760
Status : Answered
Chosen Option : 2

Q.11 The value of $\left(\frac{2}{5} \text{ of } 7\frac{1}{2} \div 2\frac{1}{4}\right) + \left(5\frac{1}{2} \div 3\frac{2}{3} \text{ of } 6\right) - 1\frac{1}{3} \times \frac{5}{8}$ is:

- Ans**
- 1. $\frac{3}{2}$
 - 2. $\frac{1}{4}$
 - 3. $\frac{2}{3}$
 - 4. $\frac{3}{4}$

Question ID : 65497834761
Status : Answered
Chosen Option : 1

Q.12 An article was sold at $\frac{11}{8}$ times of its cost price. The profit per cent is:

- Ans**
- 1. 36.5%
 - 2. 35%
 - 3. 37.5%
 - 4. 36%

Question ID : 65497834746
Status : Answered
Chosen Option : 3

Q.13 In a transaction, the profit percentage is 48% of the cost. If the cost further increases by 20% but the selling price remains the same, how much is the decrease in the profit percentage?

- Ans
- 1. 14.67%
 - 2. 24.67%
 - 3. 34.67%
 - 4. 24.0%

Question ID : 65497834748
Status : Answered
Chosen Option : 2

Q.14 A retailer gains 18% after allowing 12% discount on the cost price. If the cost price is ₹16,500, then what is the selling price?

- Ans
- 1. ₹17,354.60
 - 2. ₹16,155.50
 - 3. ₹17,550
 - 4. ₹17,133.60

Question ID : 65497834755
Status : Answered
Chosen Option : 4

Q.15 A 243 m long train running at 60 km/h takes 42 seconds to cross a tunnel. The length (in m) of the tunnel is:

- Ans
- 1. 457
 - 2. 467
 - 3. 477
 - 4. 447

Question ID : 65497834762
Status : Answered
Chosen Option : 1

Q.16 A sum of money is put on compound interest for 2 years at 20%. It would fetch ₹964 more if the interest was payable half-yearly than if it was payable yearly. Find the sum.

- Ans
- 1. ₹40,000
 - 2. ₹80,000
 - 3. ₹60,000
 - 4. ₹70,000

Question ID : 65497834749
Status : Answered
Chosen Option : 1

Q.17 Find the least number of five digits which is exactly divisible by 18, 21 and 24.

- Ans
- 1. 10080
 - 2. 10286
 - 3. 11310
 - 4. 10060

Question ID : 65497834759
Status : Answered
Chosen Option : 1

Q.18 The perimeter of a circular garden is 506 m. The cost (in ₹) of levelling it at ₹14/ m² is:

(Take $\pi = \frac{22}{7}$)

- Ans
- 1. 251831
 - 2. 312581
 - 3. 285131
 - 4. 218531

Question ID : 65497834744
Status : Not Answered
Chosen Option : --

Q.19 If 10% of A = B, then B% of 20 is the same as:

- Ans
- 1. 2% of A
 - 2. 5% of A
 - 3. 3% of A
 - 4. 4% of A

Question ID : 65497834752
Status : Answered
Chosen Option : 1

Q.20 The value of $\frac{\frac{3}{7} \div \frac{3}{7} \times \frac{3}{7}}{\frac{3}{7} \div \frac{3}{7} \text{ of } \frac{3}{7}} - \frac{9}{49}$ is:

- Ans
- 1. $\frac{40}{49}$
 - 2. 0
 - 3. 1
 - 4. $\frac{9}{49}$

Question ID : 65497834745
Status : Answered
Chosen Option : 2

Q.21 What is the difference between the compound interest compounded annually and the simple interest on ₹5,000 at the rate of 8% per annum for 2 years?

- Ans**
- 1. ₹64
 - 2. ₹84
 - 3. ₹48
 - 4. ₹32

Question ID : 65497834742
Status : Not Answered
Chosen Option : --

Q.22 If $x : 2y = 4 : 9$ and $2 : x = 3 : 4$, then what is the value of y ?

- Ans**
- 1. 4
 - 2. 3
 - 3. 5
 - 4. 6

Question ID : 65497834741
Status : Answered
Chosen Option : 2

Q.23 A, B and C complete a work in 5 days, 6 days and 8 days, respectively. If they work together and get ₹2,950 for the work, how much amount does B get?

- Ans**
- 1. ₹1,200
 - 2. ₹1,000
 - 3. ₹1,150
 - 4. ₹1,050

Question ID : 65497834747
Status : Not Answered
Chosen Option : --

Q.24 A trader buys two articles A and B for ₹600. He sells A at 20% profit and B at 10% loss. If he gains 8% in the whole transaction, then the cost price (in ₹) of article A is:

- Ans**
- 1. 350
 - 2. 360
 - 3. 375
 - 4. 380

Question ID : 65497834763
Status : Answered
Chosen Option : 2

Q.25 The average weight of 8 people increases by 2.5 kg if a new person replaces one weighing 50 kg. What is the weight of the new person?

- Ans
- 1. 52 kg
 - 2. 58 kg
 - 3. 70 kg
 - 4. 72 kg

Question ID : 65497834750
Status : Answered
Chosen Option : 2

Section : Part D English

Q.1 Select the most appropriate ANTONYM of the given word.

Ample

- Ans
- 1. Enough
 - 2. Plenty
 - 3. Spare
 - 4. Scarce

Question ID : 65497834780
Status : Answered
Chosen Option : 2

Q.2 Select the option that can be used as a one-word substitute for the given group of words.

Handwritten book

- Ans
- 1. Draft
 - 2. Edition
 - 3. Manuscript
 - 4. Outline

Question ID : 65497834767
Status : Answered
Chosen Option : 3

Q.3 Select the most appropriate option to fill in the blank.

Hill stations like Darjeeling and Nainital offer _____ to weary tourists during summer.

- Ans
- 1. strain
 - 2. activity
 - 3. solace
 - 4. aid

Question ID : 65497834766
Status : Answered
Chosen Option : 3

Q.4 Select the option that can be used as a one-word substitute for the given group of words.

Something that can be carried easily

- Ans 1. Portable
 2. Convenient
 3. Handy
 4. Reachable

Question ID : 65497834781
Status : Answered
Chosen Option : 1

Q.5 Select the most appropriate option to fill in the blank.

The Sports Minister _____ the Badminton Association officials that all help will be given to them to conduct the tournament.

- Ans 1. committed
 2. ascertained
 3. assured
 4. demonstrated

Question ID : 65497834768
Status : Answered
Chosen Option : 3

Q.6 The following sentence has been split into four segments. Identify the segment that contains a grammatical error.

The photographer climb / the tree and took pictures / of the leopard / chasing its prey.

- Ans 1. The photographer climb
 2. the tree and took pictures
 3. of the leopard
 4. chasing its prey

Question ID : 65497834770
Status : Answered
Chosen Option : 1

Q.7 Select the most appropriate synonym of the given word.

Convert

- Ans 1. Dazzle
 2. Transform
 3. Radical
 4. Affect

Question ID : 65497834775
Status : Answered
Chosen Option : 2

Q.8 Select the option that can be used as a one-word substitute for the given group of words.

Fluent or persuasive in speaking or writing

- Ans
- 1. Presenter
 - 2. Magnificent
 - 3. Eloquent
 - 4. Persuader

Question ID : 65497834776
Status : Answered
Chosen Option : 3

Q.9 The following sentence has been split into four segments. Identify the segment that contains a grammatical error.

The Great Wall of China / is no long / a continuous structure /owing to erosion.

- Ans
- 1. a continuous structure
 - 2. is no long
 - 3. The Great Wall of China
 - 4. owing to erosion

Question ID : 65497834779
Status : Answered
Chosen Option : 2

Q.10 Select the INCORRECTLY spelt word.

- Ans
- 1. Solitary
 - 2. Individual
 - 3. Criteria
 - 4. Ledgible

Question ID : 65497834782
Status : Answered
Chosen Option : 1

Q.11 Select the most appropriate ANTONYM of the given word.

Opponent

- Ans
- 1. Supporter
 - 2. Professor
 - 3. Mentor
 - 4. Presenter

Question ID : 65497834772
Status : Answered
Chosen Option : 1

Q.12 Select the INCORRECTLY spelt word.

- Ans
- 1. Hostel
 - 2. Hold
 - 3. Hospitaliti
 - 4. Hoist

Question ID : 65497834765
Status : Answered
Chosen Option : 3

Q.13 Select the most appropriate synonym of the given word.

Similar

- Ans 1. Alien
 2. Alike
 3. Several
 4. Equal

Question ID : 65497834771
Status : Answered
Chosen Option : 2

Q.14 Select the most appropriate option that can substitute the underlined segment in the given sentence. If there is no need to substitute it, select 'No substitution required'.

If you are in trouble, Tommy is the friend who stands by you.

- Ans 1. No substitution required
 2. will stand by
 3. was standing by
 4. stood by

Question ID : 65497834777
Status : Answered
Chosen Option : 3

Q.15 Select the most appropriate meaning of the given idiom.

To pull a fast one on someone

- Ans 1. To drive very fast
 2. To cheat someone
 3. To win against someone
 4. To enchant someone

Question ID : 65497834778
Status : Answered
Chosen Option : 3

Q.16 Select the most appropriate option to fill in the blank.

If the neighbours had not _____ food, we might have starved.

- Ans 1. provided
 2. added
 3. stolen
 4. thrown

Question ID : 65497834783
Status : Answered
Chosen Option : 1

Q.17 Select the most appropriate option that can substitute the underlined segment in the given sentence. If there is no need to substitute it, select 'No substitution required'.

If I see a snake, I tried to catch it.

- Ans
- 1. was trying
 - 2. No substitution required
 - 3. will try to catch
 - 4. am trying

Question ID : 65497834764
Status : Answered
Chosen Option : 3

Q.18 Select the most appropriate option that can substitute the underlined segment in the given sentence. If there is no need to substitute it, select 'No substitution required'.

Indirect questions will be used while seeking information about an embarrassing subject.

- Ans
- 1. are used while seek information
 - 2. No substitution required
 - 3. are use while seeking information
 - 4. are used while seeking information

Question ID : 65497834769
Status : Answered
Chosen Option : 4

Q.19 Select the most appropriate meaning of the given idiom.

To kick the bucket

- Ans
- 1. To lose
 - 2. To play
 - 3. To die
 - 4. To fight

Question ID : 65497834773
Status : Answered
Chosen Option : 1

Q.20 Parts of the given sentence have been given as options. One of them contains a grammatical error. Select the option that has the error.

Rama's scores in the half-yearly examination are best than Raghu's scores.

- Ans
- 1. are best than
 - 2. Raghu's scores
 - 3. Rama's scores
 - 4. in the

Question ID : 65497834774
Status : Answered
Chosen Option : 1

Comprehension:

In the following passage, some words have been deleted. Read the passage carefully and select the most appropriate option to fill in each blank.

Pollution is the (1)_____ of the environment and the biggest problem across the globe. The major causes of pollution include (2)_____ use of motor vehicles, rapid industrialisation, increasing urbanisation, use of chemical fertilisers in agriculture and burning of fossil fuels. It has a (3)_____ effect on human health. Air pollution causes respiratory diseases and other diseases related to lungs. Noise pollution impairs the (4)_____ senses and causes stress. Water pollution pollutes water, which is mainly harmful for aquatic animals. The responsibility of (5)_____ the pollution is in the hands of human beings.

SubQuestion No : 21

Q.21 Select the most appropriate option to fill in blank no. 1.

- Ans 1. mixture
 2. contamination
 3. impure
 4. adulteration

Question ID : 65497834785

Status : Answered

Chosen Option : 4

Comprehension:

In the following passage, some words have been deleted. Read the passage carefully and select the most appropriate option to fill in each blank.

Pollution is the (1)_____ of the environment and the biggest problem across the globe. The major causes of pollution include (2)_____ use of motor vehicles, rapid industrialisation, increasing urbanisation, use of chemical fertilisers in agriculture and burning of fossil fuels. It has a (3)_____ effect on human health. Air pollution causes respiratory diseases and other diseases related to lungs. Noise pollution impairs the (4)_____ senses and causes stress. Water pollution pollutes water, which is mainly harmful for aquatic animals. The responsibility of (5)_____ the pollution is in the hands of human beings.

SubQuestion No : 22

Q.22 Select the most appropriate option to fill in blank no. 2.

- Ans 1. bulky
 2. slight
 3. compact
 4. massive

Question ID : 65497834786

Status : Answered

Chosen Option : 4

Comprehension:

In the following passage, some words have been deleted. Read the passage carefully and select the most appropriate option to fill in each blank.

Pollution is the (1)_____ of the environment and the biggest problem across the globe. The major causes of pollution include (2)_____ use of motor vehicles, rapid industrialisation, increasing urbanisation, use of chemical fertilisers in agriculture and burning of fossil fuels. It has a (3)_____ effect on human health. Air pollution causes respiratory diseases and other diseases related to lungs. Noise pollution impairs the (4)_____ senses and causes stress. Water pollution pollutes water, which is mainly harmful for aquatic animals. The responsibility of (5)_____ the pollution is in the hands of human beings.

SubQuestion No : 23

Q.23 Select the most appropriate option to fill in blank no. 3.

- Ans 1. safe
 2. risky
 3. threatened
 4. hazardous

Question ID : 65497834787

Status : Answered

Chosen Option : 4

Comprehension:

In the following passage, some words have been deleted. Read the passage carefully and select the most appropriate option to fill in each blank.

Pollution is the (1)_____ of the environment and the biggest problem across the globe. The major causes of pollution include (2)_____ use of motor vehicles, rapid industrialisation, increasing urbanisation, use of chemical fertilisers in agriculture and burning of fossil fuels. It has a (3)_____ effect on human health. Air pollution causes respiratory diseases and other diseases related to lungs. Noise pollution impairs the (4)_____ senses and causes stress. Water pollution pollutes water, which is mainly harmful for aquatic animals. The responsibility of (5)_____ the pollution is in the hands of human beings.

SubQuestion No : 24

Q.24 Select the most appropriate option to fill in blank no. 4.

- Ans 1. auditory
 2. audible
 3. audacious
 4. hearing

Question ID : 65497834788

Status : Answered

Chosen Option : 1

Comprehension:

In the following passage, some words have been deleted. Read the passage carefully and select the most appropriate option to fill in each blank.

Pollution is the (1)_____ of the environment and the biggest problem across the globe. The major causes of pollution include (2)_____ use of motor vehicles, rapid industrialisation, increasing urbanisation, use of chemical fertilisers in agriculture and burning of fossil fuels. It has a (3)_____ effect on human health. Air pollution causes respiratory diseases and other diseases related to lungs. Noise pollution impairs the (4)_____ senses and causes stress. Water pollution pollutes water, which is mainly harmful for aquatic animals. The responsibility of (5)_____ the pollution is in the hands of human beings.

SubQuestion No : 25

Q.25 Select the most appropriate option to fill in blank no. 5.

- Ans 1. minimal
 2. minimise
 3. minimum
 4. minimising

Question ID : 65497834789
Status : Answered
Chosen Option : 4

Section : Part D Hindi

Q.1 _____ समाज का दर्पण है - रिक्त स्थान की पूर्ति कीजिए-

- Ans 1. आलोचक
 2. गणित
 3. निवेदक
 4. साहित्य

Question ID : 65497834805
Status : Not Answered
Chosen Option : --

Q.2 सही वर्तनी वाले शब्द का चयन कीजिए।

- Ans 1. पारीश्रमीक
 2. पारिश्रमिक
 3. परीश्रमिक
 4. पारीश्रमिक

Question ID : 65497834790
Status : Not Answered
Chosen Option : --

Q.3 दिए गए शब्द का विलोम चुनें।

उर्वर

- Ans 1. उर्वरक
 2. ऊसर
 3. धूसर
 4. नीरस

Question ID : 65497834795
Status : Not Answered
Chosen Option : --

Q.4 दिये गये वाक्यांश के लिए एक शब्द दीजिये।

चिरकाल तक जीवित रहने वाला

- Ans 1. चिरंजीवी
 2. परजीवी
 3. चिरंतन
 4. परोपकारी

Question ID : 65497834797
Status : Not Answered
Chosen Option : --

Q.5 दिये गये वाक्य के किस भाग में त्रुटि है?

आज हम बजार चलेंगे।

- Ans 1. आज
 2. चलेंगे।
 3. बजार
 4. हम

Question ID : 65497834808
Status : Not Answered
Chosen Option : --

Q.6 दिए गए वाक्य में रेखांकित खंड को प्रतिस्थापित करने के लिए सबसे उपयुक्त विकल्प का चयन करें। यदि इसे प्रतिस्थापित करने की आवश्यकता नहीं है, तो विकल्प 'किसी बदलाव की आवश्यकता नहीं है' का चयन करें।

महापुरुषों के उपदेशों का अपने जीवन में सम्मान करो।

- Ans 1. पालन करो
 2. प्रयोग करो
 3. निषेध करो
 4. किसी बदलाव की आवश्यकता नहीं है।

Question ID : 65497834801
Status : Not Answered
Chosen Option : --

Q.7 उस विकल्प का चयन करें जो निम्न मुहावरे का अर्थ व्यक्त करता है।

आंखें चुराना

- Ans 1. नाराज होना
 2. विमुख होना
 3. अनदेखा करना
 4. प्यार होना

Question ID : 65497834802
Status : Not Answered
Chosen Option : --

Q.8 दिए गए वाक्य का वह भाग ज्ञात करें जिसमें कोई त्रुटि है। यदि कोई त्रुटि नहीं है, तो 'कोई त्रुटि नहीं है' चुनें।

बुद्धिमान व्यक्ति की प्रखर बुद्धि हर कार्य में परिलक्षित होती है।

- Ans 1. कोई त्रुटि नहीं है।
 2. हर कार्य में परिलक्षित होती है।
 3. बुद्धिमान व्यक्ति क
 4. प्रखर बु

Question ID : 65497834798
Status : Not Answered
Chosen Option : --

Q.9 'जिसमें चेतना न हो' वाक्यांश के लिए एक शब्द होगा-

- Ans 1. अचेतन
 2. चिरंतन
 3. मूर्ख
 4. चेतन

Question ID : 65497834803
Status : Not Answered
Chosen Option : --

Q.10 दिए गये वाक्यांश के लिए एक शब्द है-

जिस स्त्री को कोई संतान न हो सके

- Ans 1. अश्लेषण
 2. बंध्या
 3. संतानहीन
 4. अभागी

Question ID : 65497834796
Status : Not Answered
Chosen Option : --

Q.11 'उल्लास' किसका पर्यायवाची है?

- Ans 1. भय
 2. क्रोध
 3. साहस
 4. आनंद

Question ID : 65497834809
Status : Not Answered
Chosen Option : --

Q.12 रिक्त स्थान की पूर्ति के लिए सबसे उपयुक्त शब्द का चयन करें।

हमें भारतीय होने पर _____ है।

- Ans 1. उन्माद
 2. घमंड
 3. गर्व
 4. दप

Question ID : 65497834804
Status : Not Answered
Chosen Option : --

Q.13 दिए गए वाक्य में रेखांकित खंड को प्रतिस्थापित करने के लिए सबसे उपयुक्त विकल्प का चयन करें। यदि इसे प्रतिस्थापित करने की आवश्यकता नहीं है, तो विकल्प 'किसी बदलाव की आवश्यकता नहीं है' का चयन करें।

उन्हें तात्कालिक आदेश से निलंबित कर दिये गया।

- Ans
- 1. आदेश से निलंबित कर दिये गये।
 - 2. आदेश से निलंबित कर दिया गया।
 - 3. आदेश से निलंबित करा दिये गया।
 - 4. किसी बदलाव की आवश्यकता नहीं है।

Question ID : 65497834793
Status : Not Answered
Chosen Option : --

Q.14 दिए गए वाक्य में रेखांकित खंड को प्रतिस्थापित करने के लिए सबसे उपयुक्त विकल्प का चयन करें। यदि इसे प्रतिस्थापित करने की आवश्यकता नहीं है, तो विकल्प 'किसी बदलाव की आवश्यकता नहीं है' का चयन करें।

मुझे अपने पर आत्मविश्वास है।

- Ans
- 1. अपने ऊपर आत्मविश्वास
 - 2. अपने में आत्मविश्वास
 - 3. अपने पर विश्वास
 - 4. किसी बदलाव की आवश्यकता नहीं है।

Question ID : 65497834800
Status : Not Answered
Chosen Option : --

Q.15 'निरर्थक' का विलोम शब्द होगा-

- Ans
- 1. सफल
 - 2. रक्षक
 - 3. सार्थक
 - 4. समर्थक

Question ID : 65497834806
Status : Not Answered
Chosen Option : --

Q.16 दिए गए वाक्य का वह भाग ज्ञात करें जिसमें कोई त्रुटि है। यदि कोई त्रुटि नहीं है, तो 'कोई त्रुटि नहीं है' चुनें।

यद्यपि उसके पास (1)\ उतना धन है तथापि (2)\ वह स्वस्थ नहीं है। (3)\ कोई त्रुटि नहीं है (4)

- Ans
- 1. 3
 - 2. 2
 - 3. 1
 - 4. 4

Question ID : 65497834794
Status : Not Answered
Chosen Option : --

Q.17 रिक्त स्थान की पूर्ति के लिए सबसे उपयुक्त शब्द का चयन करें।

थिएटर में कौन सा _____ खेला जा रहा है।

- Ans 1. नाटक
 2. सिनेमा
 3. पिक्चर
 4. खेल

Question ID : 65497834792
Status : Not Answered
Chosen Option : --

Q.18 'बखिया उधेड़ना' मुहावरे का सही अर्थ क्या है?

- Ans 1. अत्यधिक क्रोध होना
 2. भेद खोलना
 3. कठिन कार्य करना
 4. प्रशंसा करना

Question ID : 65497834807
Status : Not Answered
Chosen Option : --

Q.19 दिए गए शब्द के समानार्थी शब्द का चयन करें।

भ्रमर

- Ans 1. जुगनू
 2. मक्खी
 3. भौरा
 4. तितली

Question ID : 65497834799
Status : Not Answered
Chosen Option : --

Q.20 सही वर्तनी वाले शब्द का चयन कीजिए।

- Ans 1. रुढ़िवादी
 2. रुढ़िवादि
 3. रुढ़िवादि
 4. रुढ़िवादी

Question ID : 65497834791
Status : Not Answered
Chosen Option : --

Comprehension:

दिए गए गद्यांश में से कुछ शब्द हटा दिए गए हैं। संबंधित प्रश्नों में प्रत्येक संख्या के लिए सबसे उपयुक्त विकल्प का चयन करें।

प्रकृति मनुष्य को ईश्वर का अनुपम (1) _____ है। प्रकृति सदा से मनुष्य की सहचरी रही है और अपने गुणों एवं सौंदर्य से मानव को तृप्त करती रही है। मनुष्य भी उसके (2) _____ रूप के प्रति खिंचा चला गया है, परंतु जैसे-जैसे मनुष्य के हाथों में विज्ञान की शक्ति आने लगी, उसने प्रकृति का दोहन किया और अपनी सहचरी प्रकृति को (3) _____ पहुँचाना आरंभ कर दिया। विज्ञान के बल पर वह स्वयं को सर्व-शक्तिमान समझने लगा और अपने ही (4) _____ की खाई खोदने लगा। बढ़ता हुआ प्रदूषण और प्राकृतिक असंतुलन इसी के परिणाम हैं। प्रकृति को नुकसान पहुँचाकर उसने समस्त मानव जाति को नुकसान पहुँचाया है। प्रकृति के साथ (5) _____ स्थापित करके ही मनुष्यता को बचाया जा सकता है।

SubQuestion No : 21

Q.21 गद्यांश के रिक्त स्थान (1) के लिए सर्वाधिक उपयुक्त शब्द होगा-

- Ans
- 1. अभिशाप
 - 2. रूप
 - 3. एहसास
 - 4. वरदान

Question ID : 65497834811

Status : Not Answered

Chosen Option : --

Comprehension:

दिए गए गद्यांश में से कुछ शब्द हटा दिए गए हैं। संबंधित प्रश्नों में प्रत्येक संख्या के लिए सबसे उपयुक्त विकल्प का चयन करें।

प्रकृति मनुष्य को ईश्वर का अनुपम (1) _____ है। प्रकृति सदा से मनुष्य की सहचरी रही है और अपने गुणों एवं सौंदर्य से मानव को तृप्त करती रही है। मनुष्य भी उसके (2) _____ रूप के प्रति खिंचा चला गया है, परंतु जैसे-जैसे मनुष्य के हाथों में विज्ञान की शक्ति आने लगी, उसने प्रकृति का दोहन किया और अपनी सहचरी प्रकृति को (3) _____ पहुँचाना आरंभ कर दिया। विज्ञान के बल पर वह स्वयं को सर्व-शक्तिमान समझने लगा और अपने ही (4) _____ की खाई खोदने लगा। बढ़ता हुआ प्रदूषण और प्राकृतिक असंतुलन इसी के परिणाम हैं। प्रकृति को नुकसान पहुँचाकर उसने समस्त मानव जाति को नुकसान पहुँचाया है। प्रकृति के साथ (5) _____ स्थापित करके ही मनुष्यता को बचाया जा सकता है।

SubQuestion No : 22

Q.22 गद्यांश के रिक्त स्थान (2) के लिए सर्वाधिक उपयुक्त शब्द होगा-

- Ans
- 1. आकर्षक
 - 2. अनाकर्षक
 - 3. निकृष्ट
 - 4. अभिशाप्त

Question ID : 65497834812

Status : Not Answered

Chosen Option : --

Comprehension:

दिए गए गद्यांश में से कुछ शब्द हटा दिए गए हैं। संबंधित प्रश्नों में प्रत्येक संख्या के लिए सबसे उपयुक्त विकल्प का चयन करें।

प्रकृति मनुष्य को ईश्वर का अनुपम (1) _____ है। प्रकृति सदा से मनुष्य की सहचरी रही है और अपने गुणों एवं सौंदर्य से मानव को तृप्त करती रही है। मनुष्य भी उसके (2) _____ रूप के प्रति खिंचा चला गया है, परंतु जैसे-जैसे मनुष्य के हाथों में विज्ञान की शक्ति आने लगी, उसने प्रकृति का दोहन किया और अपनी सहचरी प्रकृति को (3) _____ पहुँचाना आरंभ कर दिया। विज्ञान के बल पर वह स्वयं को सर्व-शक्तिमान समझने लगा और अपने ही (4) _____ की खाई खोदने लगा। बढ़ता हुआ प्रदूषण और प्राकृतिक असंतुलन इसी के परिणाम हैं। प्रकृति को नुकसान पहुँचाकर उसने समस्त मानव जाति को नुकसान पहुँचाया है। प्रकृति के साथ (5) _____ स्थापित करके ही मनुष्यता को बचाया जा सकता है।

SubQuestion No : 23

Q.23 गद्यांश के रिक्त स्थान (3) के लिए सर्वाधिक उपयुक्त शब्द होगा-

- Ans
- 1. लाभ
 - 2. सामर्थ्य
 - 3. सम्पन्नता
 - 4. हानि

Question ID : 65497834813

Status : Not Answered

Chosen Option : --

Comprehension:

दिए गए गद्यांश में से कुछ शब्द हटा दिए गए हैं। संबंधित प्रश्नों में प्रत्येक संख्या के लिए सबसे उपयुक्त विकल्प का चयन करें।

प्रकृति मनुष्य को ईश्वर का अनुपम (1) _____ है। प्रकृति सदा से मनुष्य की सहचरी रही है और अपने गुणों एवं सौंदर्य से मानव को तृप्त करती रही है। मनुष्य भी उसके (2) _____ रूप के प्रति खिंचा चला गया है, परंतु जैसे-जैसे मनुष्य के हाथों में विज्ञान की शक्ति आने लगी, उसने प्रकृति का दोहन किया और अपनी सहचरी प्रकृति को (3) _____ पहुँचाना आरंभ कर दिया। विज्ञान के बल पर वह स्वयं को सर्व-शक्तिमान समझने लगा और अपने ही (4) _____ की खाई खोदने लगा। बढ़ता हुआ प्रदूषण और प्राकृतिक असंतुलन इसी के परिणाम हैं। प्रकृति को नुकसान पहुँचाकर उसने समस्त मानव जाति को नुकसान पहुँचाया है। प्रकृति के साथ (5) _____ स्थापित करके ही मनुष्यता को बचाया जा सकता है।

SubQuestion No : 24

Q.24 गद्यांश के रिक्त स्थान (4) के लिए सर्वाधिक उपयुक्त शब्द होगा-

- Ans
- 1. मृत्यु
 - 2. विकास
 - 3. विनाश
 - 4. प्रगति

Question ID : 65497834814

Status : Not Answered

Chosen Option : --

Comprehension:

दिए गए गद्यांश में से कुछ शब्द हटा दिए गए हैं। संबंधित प्रश्नों में प्रत्येक संख्या के लिए सबसे उपयुक्त विकल्प का चयन करें।

प्रकृति मनुष्य को ईश्वर का अनुपम (1) _____ है। प्रकृति सदा से मनुष्य की सहचरी रही है और अपने गुणों एवं सौंदर्य से मानव को तृप्त करती रही है। मनुष्य भी उसके (2) _____ रूप के प्रति खिंचा चला गया है, परंतु जैसे-जैसे मनुष्य के हाथों में विज्ञान की शक्ति आने लगी, उसने प्रकृति का दोहन किया और अपनी सहचरी प्रकृति को (3) _____ पहुँचाना आरंभ कर दिया। विज्ञान के बल पर वह स्वयं को सर्व-शक्तिमान समझने लगा और अपने ही (4) _____ की खाई खोदने लगा। बढ़ता हुआ प्रदूषण और प्राकृतिक असंतुलन इसी के परिणाम हैं। प्रकृति को नुकसान पहुँचाकर उसने समस्त मानव जाति को नुकसान पहुँचाया है। प्रकृति के साथ (5) _____ स्थापित करके ही मनुष्यता को बचाया जा सकता है।

SubQuestion No : 25

Q.25 गद्यांश के रिक्त स्थान (5) के लिए सर्वाधिक उपयुक्त शब्द होगा-

- Ans
- 1. समरूपता
 - 2. सामंजस्य
 - 3. समानता
 - 4. सहजता

Question ID : 65497834815

Status : Not Answered

Chosen Option : --