

30/01/2023

Morning



Corporate Office : Aakash Tower, 8, Pusa Road, New Delhi-110005 | Ph.: 011-47623456

Memory Based Answers & Solutions

Time : 3 hrs.

for

M.M. : 300

JEE (Main)-2023 (Online) Phase-1

(Physics, Chemistry and Mathematics)

IMPORTANT INSTRUCTIONS:

- (1) The test is of **3 hours** duration.
- (2) The Test Booklet consists of 90 questions. The maximum marks are 300.
- (3) There are **three** parts in the question paper consisting of **Physics, Chemistry** and **Mathematics** having 30 questions in each part of equal weightage. Each part (subject) has two sections.
 - (i) **Section-A:** This section contains 20 multiple choice questions which have only one correct answer. Each question carries **4 marks** for correct answer and **-1 mark** for wrong answer.
 - (ii) **Section-B:** This section contains 10 questions. In Section-B, attempt any **five questions out of 10**. The answer to each of the questions is a numerical value. Each question carries **4 marks** for correct answer and **-1 mark** for wrong answer. For Section-B, the answer should be rounded off to the nearest integer.

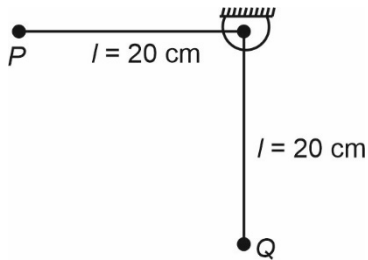
PHYSICS

SECTION - A

Multiple Choice Questions: This section contains 20 multiple choice questions. Each question has 4 choices (1), (2), (3) and (4), out of which **ONLY ONE** is correct.

Choose the correct answer:

1. Bob *P* is released from the position of rest at the moment shown. If it collides elastically with an identical bob *Q* hanging freely then velocity of *Q*, just after collision is ($g = 10 \text{ m/s}^2$)



- (1) 1 m/s (2) 4 m/s
(3) 2 m/s (4) 8 m/s

Answer (3)

Sol. Velocity of *P* just before collision is $= \sqrt{2gl}$
 $= 2 \text{ m/sec}$

As collision is elastic and the mass of *P* and *Q* are equal therefore just after collision velocity of *P* is 0 and that of *Q* is 2 m/sec.

2. Choose the option showing the correct relation between Poisson's ratio (σ), Bulk modulus (*B*) and modulus of rigidity (*G*).

- (1) $\sigma = \frac{3B - 2G}{2G + 6B}$ (2) $\sigma = \frac{6B + 2G}{3B - 2G}$
(3) $\sigma = \frac{9BG}{3B + G}$ (4) $B = \frac{3\sigma - 3G}{6\sigma + 2G}$

Answer (1)

Sol. $E = 2G(1 + \sigma)$ (1)

$E = 3B(1 - 2\sigma)$ (2)

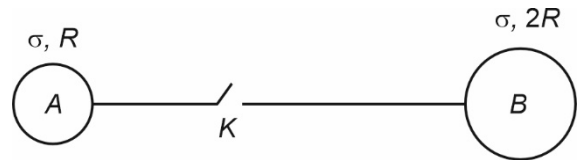
$$1 = \frac{2G}{3B} \left(\frac{1 + \sigma}{1 - 2\sigma} \right)$$

$$\Rightarrow 3B - 6B\sigma = 2G + 2G\sigma$$

$$\Rightarrow 3B - 2G = \sigma (2G + 6B)$$

$$\sigma = \left(\frac{3B - 2G}{2G + 6B} \right)$$

3. Two conducting solid spheres (*A* & *B*) are placed at a very large distance with charge densities and radii as shown:



When the key *K* is closed, find the ratio of final charge densities.

- (1) 4 : 1 (2) 1 : 2
(3) 2 : 1 (4) 1 : 4

Answer (3)

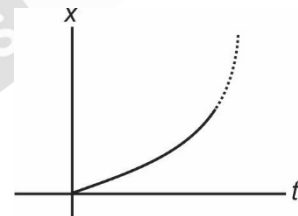
Sol. Final potential is same

$$\Rightarrow \frac{1}{4\pi\epsilon_0} \frac{Q_1}{R} = \frac{1}{4\pi\epsilon_0} \frac{Q_2}{2R} \quad \dots(1)$$

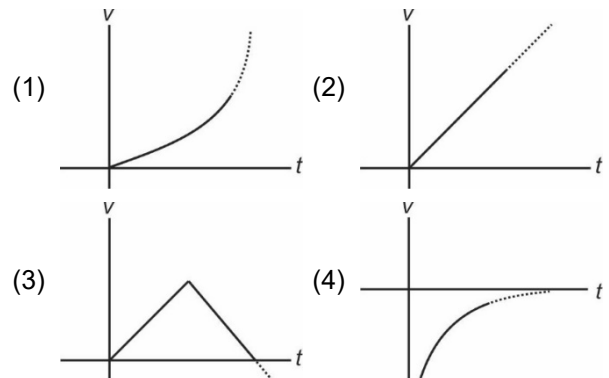
$$\text{Also, } Q_1 + Q_2 = \sigma \cdot 4\pi R^2 + \sigma \cdot 4\pi(2R)^2 \quad \dots(2)$$

$$\Rightarrow \frac{\sigma_1}{\sigma_2} = 2.$$

4. Position-time graph for a particle is parabolic and is as shown:



Choose the corresponding *v* - *t* graph



Answer (2)

Sol. Since $x \propto t^2$

$$\Rightarrow v = \frac{dx}{dt} \propto t'$$

\Rightarrow Option 2 is correct

5. For a system undergoing isothermal process, heat energy is supplied to the system. Choose the option showing correct statements
- (a) Internal energy will increase
 - (b) Internal energy will decrease
 - (c) Work done by system is positive
 - (d) Work done by system is negative
 - (e) Internal energy remains constant
- (1) (a), (c), (e) (2) (b), (d)
 (3) (c), (e) (4) (a), (d), (e)

Answer (3)

Sol. For isothermal process,

$$dT = 0$$

so, $dU = 0 \Rightarrow$ Internal energy remains same

$$dQ = dW$$

as dQ is positive,

so dW is positive

6. The heat passing through the cross-section of a conductor, varies with time ' t ' as $Q(t) = \alpha t - \beta t^2 + \gamma t^3$. (α , β and γ are positive constants.) The minimum heat current through the conductor is

- (1) $\alpha - \frac{\beta^2}{2\gamma}$ (2) $\alpha - \frac{\beta^2}{3\gamma}$
 (3) $\alpha - \frac{\beta^2}{\gamma}$ (4) $\alpha - \frac{3\beta^2}{\gamma}$

Answer (2)

Sol. Heat through cross section of rod

$$Q = \alpha t - \beta t^2 + \gamma t^3$$

$$\text{so heat current} = \frac{dQ}{dt}$$

$$\text{heat current} = \frac{dQ}{dt} = \alpha - 2\beta t + 3\gamma t^2$$

for heat current to be minimum

$$\frac{d^2Q}{dt^2} = -2\beta + 6\gamma t = 0$$

$$t = \frac{2\beta}{6\gamma} = \left(\frac{\beta}{3\gamma} \right)$$

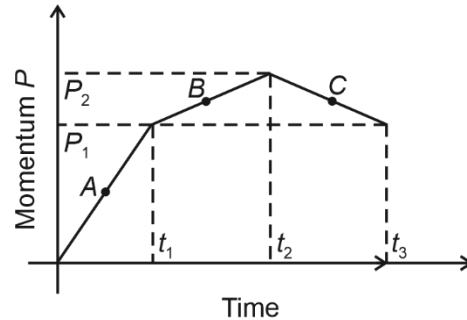
so minimum heat current

$$\left. \frac{dQ}{dt} \right|_{\text{minimum}} = \alpha - 2\beta \times \frac{\beta}{3\gamma} + 3\gamma \times \frac{\beta^2}{9\gamma^2}$$

$$= \alpha - \frac{2\beta^2}{3\gamma} + \frac{\beta^2}{3\gamma}$$

$$= \left(\alpha - \frac{\beta^2}{3\gamma} \right)$$

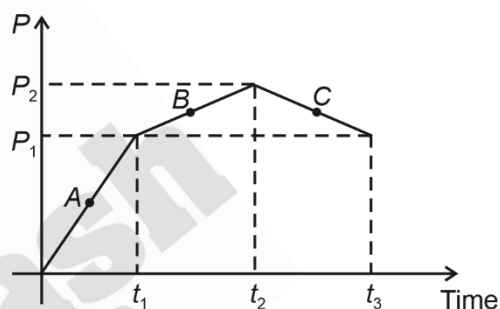
7. Momentum-time graph of an object moving along a straight line is as shown in figure. If $(P_2 - P_1) < P_1$ and $(t_2 - t_1) = t_1 < (t_3 - t_2)$ then at which points among A, B and C the magnitude of force experienced by the object is maximum and minimum respectively.



- (1) A, B (2) A, C
 (3) B, C (4) B, A

Answer (2)

Sol.



$$F_A = \frac{P_1}{t_1}$$

$$F_B = \frac{P_2 - P_1}{t_2 - t_1}$$

$$F_C = \frac{P_2 - P_1}{t_3 - t_2}$$

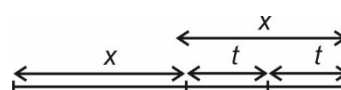
Therefore the maximum force is at A and minimum force is at C.

8. A particle moving in unidirectional motion travels half of the total distance with a constant speed of 15 m/s. Now first half of the journey time it travels at 10 m/s and second half of the remaining journey time it travels at 5 m/s. Average speed of the particle is

- (1) 12 m/s (2) 10 m/s
 (3) 7 m/s (4) 9 m/s

Answer (2)

Sol.



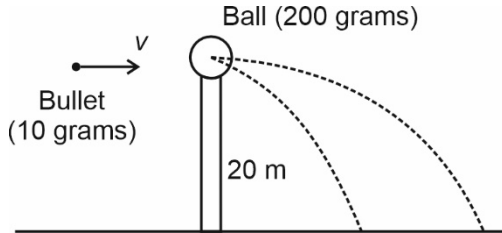
$$v_{av} = \frac{2x}{\frac{x}{15} + 2t}$$

$$= \frac{2x}{\frac{x}{15} + \frac{2x}{10+5}}$$

$$= 10 \text{ m/sec}$$

9. A bullet strikes a stationary ball kept at a height as shown. After collision, range of bullet is 120 m and that of ball is 30 m. Find initial speed of bullet. Collision is along horizontal direction.

Take $g = 10 \text{ m/s}^2$



- (1) 150 m/s (2) 90 m/s
(3) 240 m/s (4) 360 m/s

Answer (4)

Sol. $m_1v + m_2(0) = m_1v_1' + m_2v_2'$... (1)

$$\Delta t = \sqrt{\frac{2h}{g}} = 2s \quad \dots (2)$$

$$\Rightarrow v_1' = \frac{120 \text{ m}}{2s} = 60 \text{ m/s}$$

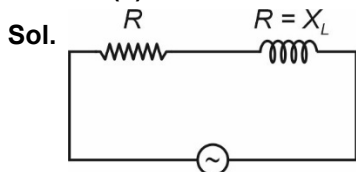
$$\& v_2' = \frac{30 \text{ m}}{2s} = 15 \text{ m/s}$$

$$\Rightarrow v = 360 \text{ m/s}$$

10. If an inductor with inductive reactance, $X_L = R$ is connected in series with resistor R across an A.C voltage, power factor comes out to be P_1 . Now, if a capacitor with capacitive reactance, $X_C = R$ is also connected in series with inductor and resistor in the same circuit, power factor becomes P_2 . Find $\frac{P_1}{P_2}$

- (1) $\sqrt{2} : 1$ (2) $1 : \sqrt{2}$
(3) $1 : 1$ (4) $1 : 2$

Answer (2)

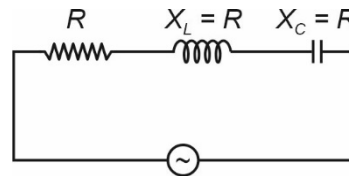


$$Z = \sqrt{R^2 + R^2}$$

$$= \sqrt{2}R$$

$$P_1 = \cos\phi = \text{power factor} = \frac{R}{Z} = \left(\frac{1}{\sqrt{2}}\right)$$

When capacitor is also connected in series



The LCR circuit is in resonance stage

$$\text{So, } Z = \sqrt{R^2 + (X_L - X_C)^2}$$

$$Z = R$$

$$P_2 = \cos\phi = \text{power factor} = \frac{R}{Z} = \frac{R}{R} = 1$$

$$\text{So, } \frac{P_1}{P_2} = \frac{\left(\frac{1}{\sqrt{2}}\right)}{1} = \frac{1}{\sqrt{2}}$$

11. Electromagnetic wave beam of power 20 mW is incident on a perfectly absorbing body for 300 ns. The total momentum transferred by the beam to the body is equal to

- (1) $2 \times 10^{-17} \text{ Ns}$ (2) $1 \times 10^{-17} \text{ Ns}$
(3) $3 \times 10^{-17} \text{ Ns}$ (4) $5 \times 10^{-17} \text{ Ns}$

Answer (1)

Sol. Total energy incident = Pt

$$\text{So total initial momentum} = \frac{Pt}{c}$$

$$\text{Total final momentum} = 0$$

$$\text{Total momentum transferred} = \frac{Pt}{c}$$

$$= \frac{20 \times 10^{-3} \times 300 \times 10^{-9}}{3 \times 10^8}$$

$$= 2 \times 10^{-17} \text{ Ns}$$

12. The velocity of an electron in the seventh orbit of hydrogen-like atom is $3.6 \times 10^6 \text{ m/s}$. Find the velocity of the electron in the 3rd orbit.

- (1) $4.2 \times 10^6 \text{ m/s}$ (2) $8.4 \times 10^6 \text{ m/s}$
(3) $2.1 \times 10^6 \text{ m/s}$ (4) $3.6 \times 10^6 \text{ m/s}$

Answer (2)

Sol. For hydrogen like atom,

$$v \propto \frac{1}{n}$$

$$\left(\frac{v_1}{v_2}\right) = \left(\frac{n_2}{n_1}\right)$$

$$\Rightarrow \frac{3.6 \times 10^6}{v_2} = \frac{3}{7}$$

$$\Rightarrow v_2 = \frac{7}{3} \times 3.6 \times 10^6$$

$$= 8.4 \times 10^6 \text{ m/s}$$

13. Electric field in a region is given by $\vec{E} = \frac{a}{x^2} \hat{i} + \frac{b}{y^3} \hat{j}$,

where x & y are co-ordinates. Find SI units of a & b .

- (1) $a - \text{Nm}^2\text{C}^{-1}$ (2) $a - \text{Nm}^3\text{C}^{-1}$
 $b - \text{Nm}^3\text{C}^{-1}$ $b - \text{Nm}^2\text{C}^{-1}$
 (3) $a - \text{NmC}^{-1}$ (4) $a - \text{Nm}^2\text{C}^{-1}$
 $b - \text{Nm}^2\text{C}^{-1}$ $b - \text{Nm}^2\text{C}^{-1}$

Answer (1)

Sol. $E - \text{NC}^{-1}$

$$x^2 - \text{m}^2$$

$$y^3 - \text{m}^3$$

$$\Rightarrow a - \text{Nm}^2\text{C}^{-1}$$

$$\& \quad b - \text{Nm}^3\text{C}^{-1}$$

14. Coil A of radius 10 cm has N_A number of turns and I_A current is flowing through it. Coil B of radius 20 cm has N_B number of turns and I_B current is flowing through it. If magnetic dipole moment of both the coils is same then

- (1) $I_A N_A = 4 I_B N_B$ (2) $I_A N_A = \frac{1}{4} I_B N_B$
 (3) $I_A N_A = 2 I_B N_B$ (4) $I_A N_A = \frac{1}{2} I_B N_B$

Answer (1)

Sol. Magnetic dipole moment $\mu = NIA = NI\pi R^2$

$$\text{So } \frac{\mu_A}{\mu_B} = \frac{N_A I_A R_A^2}{N_B I_B R_B^2} = 1$$

$$\frac{N_A I_A (10^2)}{N_B I_B (20^2)} = 1$$

$$N_A I_A = 4 N_B I_B$$

15. An ideal gas undergoes a thermodynamic process following the relation $PT^2 = \text{constant}$. Assuming symbols have their usual meaning then volume expansion coefficient of the gas is equal to

- (1) $\frac{2}{T}$ (2) $\frac{3}{T}$
 (3) $\frac{1}{2T}$ (4) $\frac{1}{T}$

Answer (2)

Sol. Volume expansion coefficient $= \frac{dV}{VdT}$

For $PT^2 = \text{constant}$

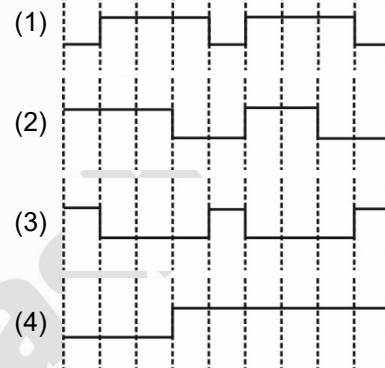
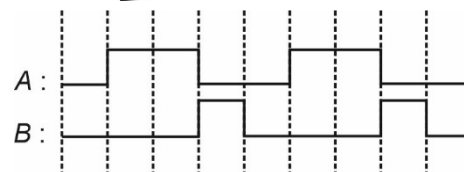
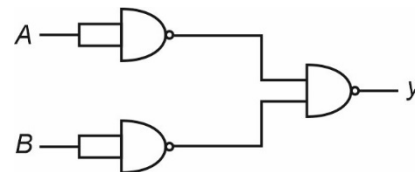
$$\text{Or } \frac{T^3}{V} = \text{constant}$$

$$\text{Or } \frac{dV}{dT} = (C) 3T^2$$

$$\text{Or } \frac{dV}{VdT} = \frac{3T^2}{T^3}$$

$$\frac{dV}{VdT} = \frac{3}{T}$$

16. Consider a combination of gates as shown :



Answer (1)

Sol. $y = (A'B') = A + B$

\Rightarrow OR gate

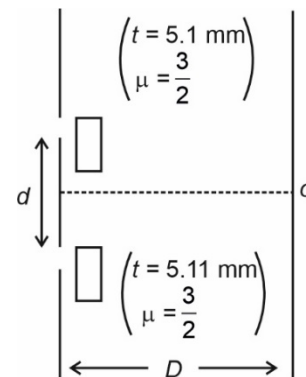
\Rightarrow Option 1

17. For the given YDSE setup. Find the number of fringes by which the central maxima gets shifted from point O.

(Given $d = 1 \text{ mm}$)

$D = 1 \text{ m}$

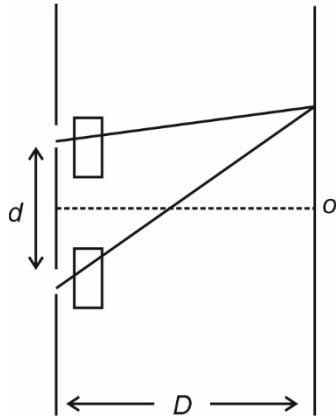
$\lambda = 5000 \text{ \AA}$)



- (1) 10 (2) 15
 (3) 8 (4) 12

Answer (1)

Sol.



at central position, path difference, is,

$$(\mu - 1)t_1 - (\mu - 1)t_2$$

$$\Delta x = (\mu - 1)(t_1 - t_2)$$

$$\Delta x = \left(\frac{3}{2} - 1\right)(5.11 - 5.10) \text{ mm}$$

$$= \frac{1}{2} \times (0.01) \text{ mm}$$

$$= 0.005 \text{ mm}$$

$$= 5 \times 10^{-6} \text{ m}$$

$$\text{No. of fringes shifted} = \frac{\Delta x}{\lambda} = \frac{5 \times 10^{-6} \text{ m}}{5 \times 10^{-7} \text{ m}}$$

$$= 10$$

18.

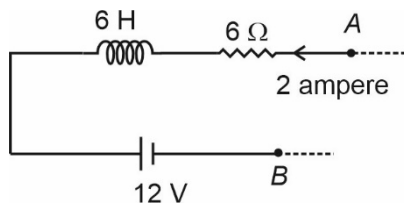
19.

20.

SECTION - B

Numerical Value Type Questions: This section contains 10 questions. In Section B, attempt any five questions out of 10. The answer to each question is a **NUMERICAL VALUE**. For each question, enter the correct numerical value (in decimal notation, truncated/rounded-off to the second decimal place; e.g. 06.25, 07.00, -00.33, -00.30, 30.27, -27.30) using the mouse and the on-screen virtual numeric keypad in the place designated to enter the answer.

21. In a part of a circuit shown:



Find $V_A - V_B$ in volts. It is given that current is decreasing at a rate of 1 ampere/s.

Answer (18)

Sol. $V_A - iR - L \frac{di}{dt} - 12 = V_B$

$$\Rightarrow V_A - V_B = +18 \text{ volts}$$

22. A particle undergoing SHM follows the position-time equation given as $x = A \sin\left(\omega t + \frac{\pi}{3}\right)$. If the SHM motion has a time period of T , then velocity will be maximum at time $t = \frac{T}{\beta}$ for first time after $t = 0$. Value of β is equal to

Answer (03.00)

Sol. $x = A \sin\left(\omega t + \frac{\pi}{3}\right)$

$$\Rightarrow v = A\omega \cos\left(\omega t + \frac{\pi}{3}\right)$$

For maximum value of v

$$\cos\left(\omega t + \frac{\pi}{3}\right) = \pm 1$$

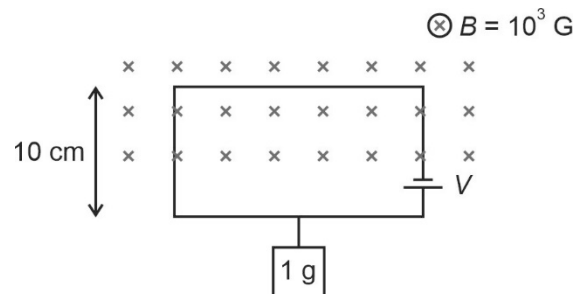
$$\Rightarrow \omega t + \frac{\pi}{3} = \pi \text{ (for nearest value of } t)$$

$$\omega t = \frac{2\pi}{3}$$

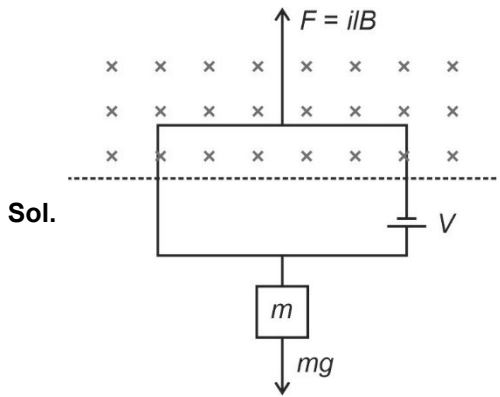
$$t = \frac{T}{3}$$

So $\beta = 3$

23. A block of mass 1 g is in equilibrium with the help of a current carrying square loop which is partially lying in constant magnetic field (B) as shown. Resistance of the loop is 10Ω . Find the voltage (V) (in volts) of the battery in the loop.



Answer (10.00)



$$i l B = mg$$

$$i = \left(\frac{mg}{lB} \right) = \frac{(1 \times 10^{-3} \text{ kg}) \times (10 \text{ m/s}^2)}{(0.1 \text{ m}) \times (0.1 \text{ T})}$$

$$= 1 \times 10^{-3} \times 10^3$$

$$i = 1 \text{ A}$$

As resistance of loop = 10Ω

$$i = \frac{V}{R} = 1 \text{ A}$$

$$V = (1 \times 10) \text{ V}$$

$$= 10 \text{ V}$$

24. Initial volume of 1 mole of a monoatomic gas is 2 litres. It is expanded isothermally to a volume of 6 litres. Change in internal energy is xR . Find x .

Answer (00)

Sol. $\Delta U = nC_V \Delta T$

$$= nC_V(0) \quad (\because \text{isothermal})$$

$$\Rightarrow \Delta U = 0$$

25. An object is placed at a distance of 40 cm from the pole of a converging mirror. The image is formed at a distance of 120 cm from the mirror on the same side. If the focal length is measured with a scale where each 1 cm has 20 equal divisions. If the fractional error in the measurement of focal length

is $\frac{1}{10k}$ Find k .

Answer (60.00)

Sol. $u = -40 \text{ cm}$

$$v = -120 \text{ cm}$$

$$\frac{1}{v} + \frac{1}{u} = \frac{1}{f}$$

$$\Rightarrow -\frac{1}{120} - \frac{1}{40} = \frac{1}{f}$$

$$\frac{1}{f} = \left(\frac{-1-3}{120} \right) = -\frac{4}{120}$$

$$f = -30 \text{ cm}$$

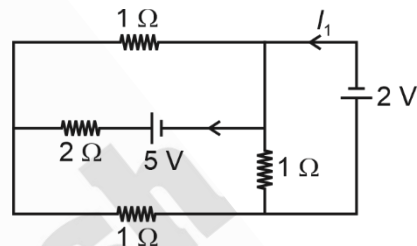
$$\text{Least count of scale} = \left(\frac{1}{20} \right) \text{ cm}$$

$$\text{Fractional error} = \left(\frac{1}{\frac{20}{30}} \right) = \left(\frac{1}{600} \right)$$

$$\text{as } \frac{1}{10k} = \frac{1}{600}$$

$$k = 60$$

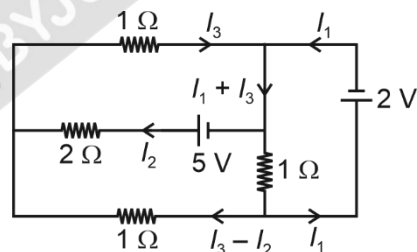
26.



In two circuit shown above the value of current I_1 (in amperes) is equal to $-\frac{y}{5}$ A. Value of y is equal to

Answer (11.00)

Sol.



Using Kirchoff's law.

$$I_1 + I_3 - I_2 = -2 \quad \dots(i)$$

$$I_3 + 2I_2 = 5 \quad \dots(ii)$$

$$2I_2 - (I_3 - I_2) - (I_1 + I_3 - I_2) = 5 \quad \dots(iii)$$

$$\Rightarrow I_1 = -\frac{11}{5} \text{ A}$$

$$\Rightarrow y = 11$$

27. ??

28. ??

29. ??

30. ??

CHEMISTRY

SECTION – A

Multiple Choice Questions: This section contains 20 multiple choice questions. Each question has 4 choices (1), (2), (3) and (4), out of which **ONLY ONE** is correct.

Choose the correct answer :

1. Caprolactam when heated at high temperature, gives

- (1) Nylon 6, 6
- (2) Dacron
- (3) Teflon
- (4) Nylon 6

Answer (4)

Sol. Caprolactam on heating at high temperature gives Nylon-6 polymer.

2. Molarity of CO₂ in soft drink is 0.01 M. The volume of soft drink is 300 mL. Mass of CO₂ in soft drink is

- (1) 0.132 g
- (2) 0.481 g
- (3) 0.312 g
- (4) 0.190 g

Answer (1)

Sol. Moles = 0.01 × 0.3 = 0.003

$$\text{Mass} = 0.003 \times 44 = 0.132 \text{ gm}$$

3. During the qualitative analysis of SO₃²⁻ using dilute H₂SO₄, SO₂ gas evolved which turns K₂Cr₂O₇ solution (acidified H₂SO₄)

- (1) Green (2) Black
- (3) Blue (4) Red

Answer (1)

Sol. Orange colour of dichromate solution (K₂Cr₂O₇) converts to green (Cr³⁺).

4. Number of lone pair of electrons on central atom?

| | Column-I | | Column-II |
|-----|-------------------------------|-----|-----------|
| (A) | IF ₇ | (P) | 0 |
| (B) | ICl ₄ ⁻ | (Q) | 1 |
| (C) | XeF ₂ | (R) | 2 |
| (D) | XeF ₆ | (S) | 3 |

Match the following

- (1) (A)→(P); (B)→(Q); (C)→(R); (D)→(S)
- (2) (A)→(P); (B)→(R); (C)→(S); (D)→(Q)
- (3) (A)→(R); (B)→(S); (C)→(P); (D)→(Q)
- (4) (A)→(S); (B)→(R); (C)→(Q); (D)→(P)

Answer (2)

Sol. Molecule/species No. of lone pair

- IF₇ → 0
- ICl₄ → 2
- XeF₂ → 3
- XeF₆ → 1

5. Which one of the following is water soluble?

- (a) BeSO₄
 - (b) MgSO₄
 - (c) CaSO₄
 - (d) SrSO₄
 - (e) BaSO₄
- (1) Only a and b (2) Only a, b, c
 - (3) Only d and e (4) Only a and e

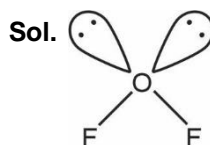
Answer (1)

Sol. Solubility of sulphates of group-2 elements decreases down the group. BeSO₄ and MgSO₄ are appreciably soluble in water. CaSO₄, SrSO₄ and BaSO₄ are practically insoluble in water.

6. Shape of OF₂ molecule is?

- (1) Bent (2) Linear
- (3) Tetrahedral (4) T-shaped

Answer (1)



It is sp³ hybridised therefore its shape will be bent or V-shaped.

7. Inhibitor of cancer growth

- (1) Cisplatin
- (2) EDTA
- (3) Cobalt
- (4) Ethane 1, 2 - diamine

Answer (1)

Sol. Cisplatin acts as an anticancer agent.

8. Speed of e^- in 7th orbit is 3.6×10^6 m/s then find the speed in 3rd orbit

- (1) 3.6×10^6 m/s
- (2) 8.4×10^6 m/s
- (3) 7.5×10^6 m/s
- (4) 1.8×10^6 m/s

Answer (2)

Sol. Speed of electron in n^{th} orbit of a Bohr atom is given by

$$v_n = (v_1)_H \frac{Z}{n}$$

If $n = 7$

$$v_7 = (v_1)_H \frac{Z}{7} = 3.6 \times 10^6 \text{ m/s}$$

If $n = 3$

$$v_3 = (v_1)_H \frac{Z}{3}$$

$$= \frac{7 \times 3.6 \times 10^6}{3}$$

$$= 8.4 \times 10^6 \text{ m/s}$$

9. Match the following :

Atomic Number

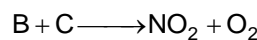
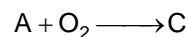
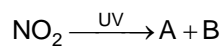
- | | |
|----------|-------------|
| (i) 52 | (p) s-block |
| (ii) 37 | (q) p-block |
| (iii) 65 | (r) d-block |
| (iv) 74 | (s) f-block |

- (1) (i) \rightarrow (q); (ii) \rightarrow (p); (iii) \rightarrow (r); (iv) \rightarrow (s)
- (2) (i) \rightarrow (q); (ii) \rightarrow (p); (iii) \rightarrow (s); (iv) \rightarrow (r)
- (3) (i) \rightarrow (s); (ii) \rightarrow (r); (iii) \rightarrow (p); (iv) \rightarrow (q)
- (4) (i) \rightarrow (r); (ii) \rightarrow (p); (iii) \rightarrow (q); (iv) \rightarrow (s)

Answer (2)

Sol. 37 is Rubidium belonging to 1st group of s-block.



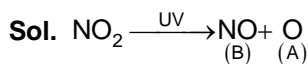
10. Consider the following reactions



A, B and C are respectively

- (1) O, NO, O₃
- (2) NO, O, O₃
- (3) NO, O₃, O
- (4) O₃, O, NO

Answer (1)



11. Which of the following option contains the correct match:

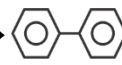
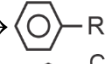
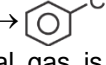
(List-I) (Reactions) (List-II) (Products)

- | | |
|------------------|---|
| (A) Wurtz | (P)  |
| (B) Fittig | (Q) R - R |
| (C) Wurtz Fittig | (R)  |
| (D) Sandmeyer | (S)  |

- (1) A \rightarrow Q; B \rightarrow P; C \rightarrow R; D \rightarrow S
- (2) A \rightarrow P; B \rightarrow Q; C \rightarrow R; D \rightarrow S
- (3) A \rightarrow S; B \rightarrow R; C \rightarrow Q; D \rightarrow P
- (4) A \rightarrow R; B \rightarrow S; C \rightarrow P; D \rightarrow Q

Answer (1)

Sol. The correct matches are

- (A) Wurtz \rightarrow R - R
- (B) Fittig \rightarrow 
- (C) Wurtz fittig \rightarrow 
- (D) Sandmeyer \rightarrow 

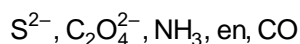
12. If volume of ideal gas is increased isothermally, then its internal energy

- (1) Increased
- (2) Remains constant
- (3) Is decreased
- (4) Can be increased or decreased

Answer (2)

Sol. Internal energy of ideal gas depends only upon temperature.

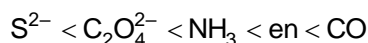
13. Arrange the following ligands according to their increasing order of field strength



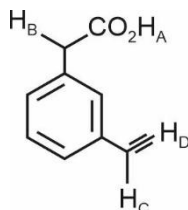
- (1) $S^{2-} < CO < NH_3 < en < C_2O_4^{2-}$
- (2) $S^{2-} < NH_3 < en < CO < C_2O_4^{2-}$
- (3) $S^{2-} < C_2O_4^{2-} < NH_3 < en < CO$
- (4) $CO < en < NH_3 < C_2O_4^{2-} < S^{2-}$

Answer (3)

Sol. The correct order of field strength is



14. Consider the following molecule

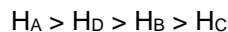


Select the correct order of acidic strength

- (1) $H_A > H_D > H_B > H_C$
- (2) $H_B > H_A > H_D > H_C$
- (3) $H_A > H_B > H_C > H_D$
- (4) $H_C > H_B > H_D > H_A$

Answer (1)

Sol. The correct order of acidic strength is



15. Which of the following compound is used as the antacid?

- (1) Ranitidine
- (2) Prontosil
- (3) Norethindrone
- (4) Codeine

Answer (1)

Sol. Ranitidine is used as the antacid.

16. The role of SiO_2 in Cu extraction is

- (1) Converts FeO to $FeSiO_3$
- (2) Converts CaO to $CaSiO_3$
- (3) Reduces Cu_2S to Cu
- (4) None of these

Answer (1)

Sol. It converts FeO to $FeSiO_3$

17. Assertion: Ketoses gives selivanoff test.

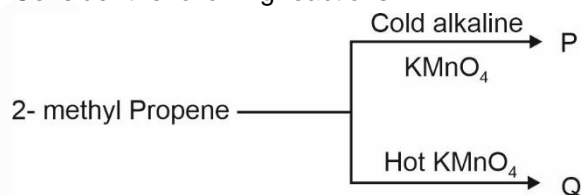
Reason : Ketoses undergo β - elimination to form furfural.

- (1) Assertion and reason both are correct and reason is the correct explanation of assertion
- (2) Assertion and reason both are correct but reason is not the correct explanation of assertion.
- (3) Assertion is correct and reason is incorrect
- (4) Assertion is incorrect but reason is correct.

Answer (1)

Sol. Assertion and reason both are correct and reason is the correct explanation of assertion.

18. Consider the following reactions:

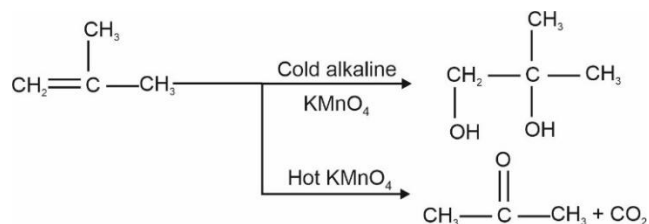


The products P and Q respectively are?

- (1) $\begin{array}{c} \text{CH} \quad \text{OH} \\ | \quad | \\ \text{CH}_2 - \text{C} - \text{CH}_3 \\ | \\ \text{CH}_3 \end{array}$ and $\begin{array}{c} \text{OH} \\ | \\ \text{CH}_3 - \text{CH} - \text{CH}_3 \end{array}$
- (2) $\begin{array}{c} \text{OH} \quad \text{OH} \\ | \quad | \\ \text{CH}_2 - \text{C} - \text{CH}_3 \\ | \\ \text{CH}_3 \end{array}$ and $\begin{array}{c} \text{O} \\ || \\ \text{CH}_3 - \text{C} - \text{CH}_3 \end{array}$
- (3) $\begin{array}{c} \text{O} \\ || \\ \text{CH}_3 - \text{C} - \text{CH}_3 \end{array}$ and HCOOH
- (4) HCOOH and $\begin{array}{c} \text{OH} \\ | \\ \text{CH}_3 - \text{C} - \text{CH}_3 \end{array}$

Answer (2)

Sol.



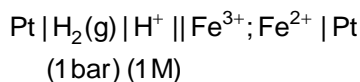
19.

20.

SECTION - B

Numerical Value Type Questions: This section contains 10 questions. In Section B, attempt any five questions out of 10. The answer to each question is a **NUMERICAL VALUE**. For each question, enter the correct numerical value (in decimal notation, truncated/rounded-off to the second decimal place; e.g. 06.25, 07.00, -00.33, -00.30, 30.27, -27.30) using the mouse and the on-screen virtual numeric keypad in the place designated to enter the answer.

21. For given cell, at T K



$$E_{\text{cell}} = .712 \text{ V}$$

$$E_{\text{cell}}^{\circ} = .770 \text{ V}$$

$$\text{if } \frac{[\text{Fe}^{2+}]}{[\text{Fe}^{3+}]} \text{ is } t \left(\frac{2.303 RT}{F} = .058 \right)$$

$$\text{then find } \left(\frac{t}{5} \right)$$

Answer (2)

$$\text{Sol. } .712 = .770 - \frac{.058}{2} \log \left[\frac{\text{Fe}^{2+}}{\text{Fe}^{3+}} \right]^2$$

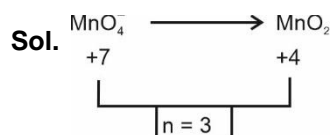
$$-.058 = -.058 \log \left[\frac{\text{Fe}^{2+}}{\text{Fe}^{3+}} \right]$$

$$\frac{\text{Fe}^{2+}}{\text{Fe}^{3+}} = 10 = t$$

$$\frac{t}{5} = 2$$

22. How many moles of electrons are required to reduce 1 mole of permanganate ions into manganese dioxide

Answer (3)



3 mole of e^- are required

23. 600 mL of 0.04 M HCl is mixed with 400 mL of 0.02 M H_2SO_4 . Find out the pH of resulting solution (Nearest integer).

Answer (01.00)

$$\text{Sol. m moles of } \text{H}^+ \text{ from HCl} = 0.04 \times 600 = 24$$

$$\text{m moles of } \text{H}^+ \text{ from } \text{H}_2\text{SO}_4 = 0.02 \times 2 \times 400 = 16$$

$$\text{Total m moles of } \text{H}^+ = 24 + 16 = 40$$

$$\text{Final volume of solution} = 1000 \text{ mL}$$

$$[\text{H}^+] = \frac{40}{1000} = 0.04 \text{ M}$$

$$\text{pH} = -\log 0.04 = 1.4$$

24. A solution of 2 g of a solute and 20 g water has boiling point 373.52 K. Then find the molar mass of solute in grams? [Given : $K_b = 0.52 \text{ K kg/mole}$ and solute is non-electrolyte].

Answer (100)

$$\text{Sol. } \Delta T_b = K_b \cdot m$$

$$0.52 = 0.52 \times \frac{2/M}{.02}$$

$$M = 100 \text{ g}$$

25. When first order kinetic, rate constant is $2.011 \times 10^{-3} \text{ sec}^{-1}$, the time taken in decomposition of substance from 7 g to 2 g will be. [Use $\log 7 = 0.845$ and $\log 2 = 0.301$]

Answer (623)

$$\text{Sol. } A \rightarrow \text{Products}$$

$$\text{Initial moles of } A = \frac{7}{M} \text{ (M is molar mass of A)}$$

$$\text{Final moles of } A = \frac{2}{M}$$

$$\text{Rate constant } K = 2.011 \times 10^{-3} \text{ s}^{-1}$$

$$t = \frac{2.303}{k} \log \frac{7}{2}$$

$$= \frac{2.303}{2.011 \times 10^{-3}} [0.845 - 0.301]$$

$$= 623 \text{ s}$$

- 26.
- 27.
- 28.
- 29.
- 30.

MATHEMATICS

SECTION - A

Multiple Choice Questions: This section contains 20 multiple choice questions. Each question has 4 choices (1), (2), (3) and (4), out of which **ONLY ONE** is correct.

Choose the correct answer :

1. Coefficient of x^{301} in $(1 + x)^{500} + x(1 + x)^{499} + x^2(1 + x)^{498} + \dots + x^{500}$ is equal to
- (1) ${}^{506}C_{306}$
 (2) ${}^{501}C_{300}$
 (3) ${}^{501}C_{301}$
 (4) ${}^{500}C_{300}$

Answer (3)

Sol. Coeff of $x^{301} = {}^{500}C_{301} + {}^{499}C_{300} + {}^{498}C_{299} + \dots + {}^{199}C_0$

$$= {}^{500}C_{199} + {}^{499}C_{199} + {}^{498}C_{199} + \dots + {}^{199}C_{199}$$

$$= {}^{501}C_{200}$$

$$= {}^{501}C_{301}$$

2. $\tan 15^\circ + \frac{1}{\tan 165^\circ} + \frac{1}{\tan 105^\circ} + \tan 195^\circ = 2a$, then value of $\left(a + \frac{1}{a}\right)$ is

- (1) $4 - 2\sqrt{3}$ (2) $\frac{-4}{\sqrt{3}}$
 (3) 2 (4) $5 - \frac{3}{2}\sqrt{3}$

Answer (2)

Sol. $\tan 15^\circ + \cot 165^\circ + \cot 105^\circ + \tan 195^\circ$

$$= \tan 15^\circ - \cot 15^\circ - \tan 15^\circ + \tan 15^\circ$$

$$= \tan 15^\circ - \cot 15^\circ$$

$$= -2\sqrt{3}$$

$$\Rightarrow a = -\sqrt{3}$$

$$a + \frac{1}{a} = -\sqrt{3} - \frac{1}{\sqrt{3}} = \frac{-4}{\sqrt{3}}$$

3. If set $A = \{a, b, c\}$
 $R : A \rightarrow A$
 $R = \{(a, b), (b, c)\}$

How many elements should be added for making it symmetric and transitive.

- (1) 2 (2) 3
 (3) 4 (4) 7

Answer (4)

Sol. For symmetric

$$(a, b), (b, c) \in R$$

$$\Rightarrow (b, a), (c, b) \in R$$

For transitive.

$$(a, b), (b, c) \in R$$

$$\Rightarrow (a, c) \in R$$

Now,

$$(a, c) \in R$$

$$\Rightarrow (c, a) \in R \quad \text{\{For symmetric\}}$$

$$(a, b), (b, a) \in R$$

$$\Rightarrow (a, a) \in R$$

$$(b, c), (c, b) \in R$$

$$\Rightarrow (b, b) \in R$$

$$(c, b), (b, c) \in R$$

$$\Rightarrow (c, c) \in R$$

\therefore elements to be added

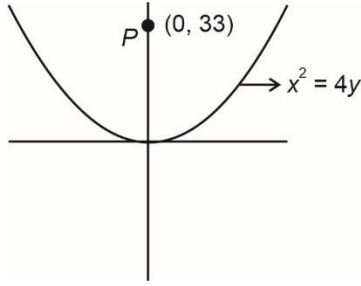
$$\{(b, a) (c, b) (b, b) (a, a) (a, c) (c, a) (c, c)\}$$

Total 7 elements

4. Let $P(h, k)$ be two points on $x^2 = 4y$ which is at shortest distance from $Q(0, 33)$ then difference of distances of $P(h, k)$ from directrix of $y^2 = 4(x + y)$ is
- (1) 2
 (2) 4
 (3) 6
 (4) 8

Answer (2)

Sol. For normal through (0, 33)



Normal at point $(2t, t^2)$

$$x = -ty + 2at + at^3$$

$$0 = -t \cdot 33 + 2t + t^3$$

$$\Rightarrow t = 0 \text{ OR } \pm\sqrt{31}$$

Points at which normal are drawn are

$$A(0, 0), B(2\sqrt{31}, 31), C(-2\sqrt{31}, 31)$$

Shortest distance

$$= PB = PC = \sqrt{124 + 4} = 8\sqrt{2} \text{ units}$$

Given parabola $(y - 2)^2 = 4(x + 1)$

Directrix is $x = -2$, that is line L

$$B_L - C_L = |(-2 + 2\sqrt{31}) - (2 + 2\sqrt{31})|$$

$$= 4$$

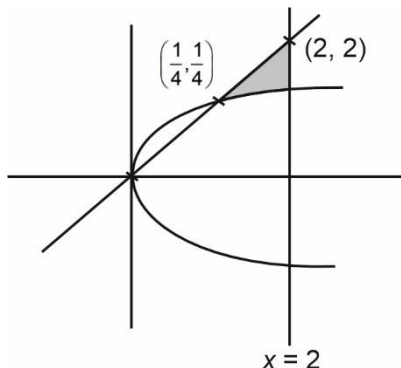
5. Area bounded by larger part in I quadrant by $x = 4y^2$, $x = 2$ and $y = x$ is A then $3A$ equals

$$(1) 6 + \frac{1}{32} - 2\sqrt{2} \quad (2) 2 + \frac{1}{96} - \frac{2\sqrt{2}}{3}$$

$$(3) \frac{2\sqrt{2}}{3} \quad (4) 96$$

Answer (1)

Sol.



Shaded area is the required area

$$A = \int_{1/4}^2 \left(x - \frac{\sqrt{x}}{2} \right) dx$$

$$= \frac{x^2}{2} - \frac{x^{3/2}}{3} \Big|_{1/4}^2$$

$$= \left(2 - \frac{2\sqrt{2}}{3} \right) - \left(\frac{1}{32} - \frac{1}{24} \right)$$

$$= 2 + \frac{1}{96} - \frac{2\sqrt{2}}{3}$$

$$\Rightarrow 3A = 6 + \frac{1}{32} - 2\sqrt{2} \text{ sq. units.}$$

6. A die with points (2, 1, 0, -1, -2, 3) is thrown 5 times. The probability that the product of outcomes on all throws is positive is

$$(1) \frac{521}{2592}$$

$$(2) \frac{16}{81}$$

$$(3) \frac{41}{288}$$

$$(4) \frac{28}{81}$$

Answer (1)

Sol. Either all outcomes are positive or any two are negative.

$$\text{The required probability} = {}^5C_5 \left(\frac{1}{2}\right)^5 + {}^5C_2 \left(\frac{1}{3}\right)^2 \left(\frac{1}{2}\right)^3$$

$$+ {}^5C_4 \left(\frac{1}{3}\right)^4 \left(\frac{1}{2}\right)^1 = \frac{5}{162} + \frac{1}{32} + \frac{5}{36} = \frac{521}{2592}$$

7. Let $S = \{1, 2, 3, 4, 5\}$

if $f: S \rightarrow P(S)$, where $P(S)$ is power set of S . Then number of one-one functions f can be made is

$$(1) (32)^5$$

$$(2) \frac{32!}{27!}$$

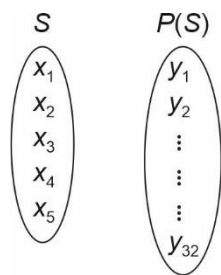
$$(3) {}^{32}C_{27}$$

$$(4) {}^{32}P_{27}$$

Answer (2)

Sol. $n(S) = 5$

$$n(P(S)) = 2^5 = 32$$



$$\therefore \text{No. of one-one function} = 32 \times 31 \times 30 \times 24 \times 28$$

$$= \frac{32!}{27!}$$

8. A line is cutting x axis and y axis at two points A and B, respectively, where $OA = a$, $OB = b$. A perpendicular is drawn from O (origin) to AB at an angle of $\frac{\pi}{6}$ from positive x-axis. If area of triangle

$$OAB = \frac{98\sqrt{3}}{3} \text{ sq. units, then } \sqrt{3} a + b \text{ is equal to}$$

- (1) 28 (2) 14
 (3) 12 (4) 7

Answer (1)

Sol. Let the perpendicular distance of line from origin is p .

$$\Rightarrow \text{Equation of AB: } \frac{x\sqrt{3}}{2} + \frac{y}{2} = p$$

$$\Rightarrow \frac{x}{\frac{2p}{\sqrt{3}}} + \frac{y}{2p} = 1$$

$$OA = \frac{2p}{\sqrt{3}}, OB = 2p$$

$$\frac{1}{2} \cdot \frac{2p}{\sqrt{3}} \cdot 2p = \frac{98}{\sqrt{3}}$$

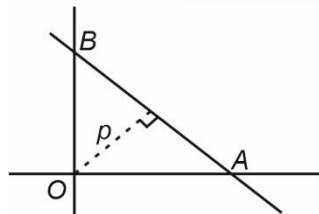
$$\Rightarrow p = 7$$

$$OA = a = \frac{14}{\sqrt{3}}$$

$$OB = b = 14$$

$$\sqrt{3}a + b$$

$$\Rightarrow 14 + 14 = 28$$



9. For solution of differential equation

$$\frac{dy}{dx} - \frac{3x^5 \tan^{-1}(x^3)}{(1+x^6)^{\frac{3}{2}}} y = -\frac{x^3 \tan^{-1} x^3}{\sqrt{1+x^6}}$$

given that $y(0) = 0$ then $y(1)$ is

- (1) $1 - e^{\frac{\pi}{4\sqrt{2}}}$
 (2) $1 - e^{\left(\frac{1}{\sqrt{2}} - \frac{\pi}{4\sqrt{2}}\right)}$
 (3) $e^{\frac{1}{\sqrt{2}}} - e^{\frac{\pi}{4\sqrt{2}}}$
 (4) $e^{\frac{\pi}{4\sqrt{2}}}$

Answer (2)

Sol. IF = $\int \frac{-3x^5 \tan^{-1}(x^3)}{(1+x^6)^{\frac{3}{2}}} dx$

Let $\tan^{-1}(x^3) = t$

$$IF = e^{-\int t \sin t} = e^{(t \cos t - \sin t)}$$

Solution of Differential equation

$$y \cdot e^{(t \cos t - \sin t)} = \int e^{(t \cos t - \sin t)} (-t \sin t) dt$$

$$y \cdot e^{(t \cos t - \sin t)} = e^{(t \cos t - \sin t)} + c$$

$$t = 0 \rightarrow y = 0$$

$$\therefore c = -1$$

When $x = 1$, $t = \frac{\pi}{4}$

$$y \cdot e^{\left(\frac{\pi}{4\sqrt{2}} - \frac{1}{\sqrt{2}}\right)} = e^{\left(\frac{\pi}{4\sqrt{2}} - \frac{1}{\sqrt{2}}\right)} - 1$$

$$y = 1 - e^{\left(\frac{1}{\sqrt{2}} - \frac{\pi}{4\sqrt{2}}\right)}$$

10. $\frac{3(e-1)}{e} \int_1^2 x^2 e^{[x]+[x^3]} dx$ equals

- (1) $e^9 - e$ (2) $e^8 - 1$
 (3) $e^8 - e$ (4) $e^9 - 1$

Answer (3)

SECTION - B

Numerical Value Type Questions: This section contains 10 questions. In Section B, attempt any five questions out of 10. The answer to each question is a **NUMERICAL VALUE**. For each question, enter the correct numerical value (in decimal notation, truncated/rounded-off to the second decimal place; e.g. 06.25, 07.00, -00.33, -00.30, 30.27, -27.30) using the mouse and the on-screen virtual numeric keypad in the place designated to enter the answer.

Sol. $I = \int_1^2 x^2 e^{[x]+[x^3]} dx = e \int_1^2 x^2 \cdot e^{[x^3]} dx$

Let $x^3 = t$

$I = e \int_1^8 \frac{dt}{3} e^{[t]} = \frac{e}{3} (e + e^2 + \dots + e^7)$

$= \frac{e^2}{3} \left(\frac{e^7 - 1}{e - 1} \right)$

So, $\frac{3(e-1)}{e} \cdot \frac{e^2}{3} \cdot \frac{e^7 - 1}{e - 1} = e^8 - e$

11. \hat{n} is a vector, $\vec{a} \neq 0, \vec{b} \neq 0$. If $\vec{n} \perp \vec{c}, \vec{a} = \alpha \vec{b} - \hat{n}$ and $\vec{b} \cdot \vec{c} = 12$ then the value of $|\vec{c} \times (\vec{a} \times \vec{b})|$ equals (where \hat{n} represents unit vector in the direction of \vec{n})

- (1) 144
- (2) $\sqrt{12}$
- (3) 12
- (4) 24

Answer (3)

Sol. $\vec{a} = \alpha \vec{b} - \hat{n}$

$\Rightarrow \vec{a} \times \vec{b} = -\hat{n} \times \vec{b}$

Now,

$|\vec{c} \times (\vec{a} \times \vec{b})|$

$= |\vec{c} \times (-\hat{n} \times \vec{b})|$

$= |\hat{n}(12) - \vec{b}(0)|$

$= 12$

- 12.
- 13.
- 14.
- 15.
- 16.
- 17.
- 18.
- 19.
- 20.

21. $\lim_{x \rightarrow 0} \frac{\int_0^x \frac{t^3}{1+t^6} dt}{x^4}$ equals

Answer (12)

Sol. $\lim_{x \rightarrow 0} \frac{48 \int_0^x \frac{t^3}{t^6+1} dt}{x^4}$

As $\frac{0}{0}$ form, applying L' hospital rule we get

$\lim_{x \rightarrow 0} 48 \frac{x^3}{(x^6+1) \cdot 4x^3} = 48 \cdot \frac{1}{4} = 12$

22. If $a_n = \frac{-2}{4n^2 - 16n + 15}$ and $a_1 + a_2 + \dots + a_{25} = \frac{m}{n}$

where m and n are coprime, then the value of $m + n$ is

Answer (191)

Sol. $a_n = \frac{-2}{4n^2 - 16n + 15} = \frac{-2}{(2n-3)(2n-5)}$

$= \frac{1}{2n-3} - \frac{1}{2n-5}$

$a_1 + a_2 + \dots + a_{25} = \left(\frac{1}{-1} - \frac{1}{-3} \right) + \dots + \left(\frac{1}{47} - \frac{1}{45} \right)$

$= \frac{1}{47} + \frac{1}{3} = \frac{50}{141}$

$\therefore m + n = 191$

23. If $z = 1 + i$ and $z_1 = \frac{i + \bar{z}(1-i)}{\bar{z}(1-z)} = z_1$, then find the value of $\frac{12}{\pi} \arg(z_1)$.

Answer (3)

Sol. $z_1 = \frac{i + \bar{z}(1-i)}{\bar{z}(1-z)} = \frac{i + (1-i)(1-i)}{(1-i)(-i)} = \frac{1}{1-i}$

$$\arg z_1 = \arg\left(\frac{1}{1-i}\right) = -\arg(1-i) = \frac{\pi}{4}$$

$$\frac{12}{\pi} \arg(z_1) = \frac{12}{\pi} \times \frac{\pi}{4} = 3$$

24. Mean & Variance of 7 observations are 8 & 16 respectively, if number 14 is omitted then a & b are new mean & variance. The value of $a + b$ is

Answer (19)

Sol. Let x_1, \dots, x_7 are observation

$$\text{New mean} = \frac{8 \times 7 - 14}{6} = 7$$

$$\therefore \frac{\sum_{i=1}^n x_i^2}{7} - 64 = 16 \Rightarrow \sum x_i^2 = 560$$

$$\sum x_{i(\text{new})}^2 = 560 - 14^2$$

$$\therefore b = \frac{364}{6} - 7^2 = \frac{70}{6} = \frac{35}{3}$$

$$\therefore a + b = 7 + \frac{35}{3} = \frac{56}{3} = 18.67$$

Rounding off gives 19

25. If coefficient of x^{15} in expansion of $\left(ax^3 + \frac{1}{bx^{1/3}}\right)^{15}$ is equal to coefficient of x^{-15} in expansion of

$$\left(ax^{1/3} + \frac{1}{bx^3}\right)^{15} \text{ then } |ab - 5| \text{ is equal to}$$

Answer (04.00)

Sol. $a_n \left(ax^3 + \frac{1}{bx^{1/3}}\right)^{15} \Rightarrow T_{r+1} = {}^{15}C_r a^{15-r} (x^3)^{15-r} b^{-r} x^{-\frac{r}{3}}$

$$45 - 3r - \frac{r}{3} = 15 \Rightarrow \frac{10r}{3} = 30$$

$$\boxed{r = 9}$$

$$a_n \left(ax^{\frac{1}{3}} + \frac{1}{bx^3}\right)^{15} \Rightarrow T_{r+1} = {}^{15}C_r a^{15-r} x^{\frac{15-r}{3}} b^{-r} x^{-3r}$$

$$\frac{15-r}{3} - 3r = -15$$

$$15 - r - 9r = -45$$

$$\Rightarrow r = 6$$

$$\text{So, } {}^{15}C_9 a^6 b^{-9} = {}^{15}C_6 a^9 b^{-6}$$

$$\Rightarrow a^{-3} b^{-3} = 1$$

$$\text{or } \boxed{ab = 1}$$

$$|ab - 5| = 4$$

26. Using 1, 2, 3, 5, 4-digit numbers are formed, where repetition is allowed. How many of them is divisible by 15?

Answer (21)

Sol. Units digit will be 5

$$\underline{a} \quad \underline{b} \quad \underline{c} \quad \underline{5}$$

$$a + b + c = (3\lambda + 1) \text{ type}$$

For (a, b, c) possibilities are

$$(2, 2, 3) (1, 1, 5) (1, 1, 2)$$

$$(3, 3, 1) (5, 5, 3) (2, 3, 5)$$

$$\text{For } (2, 2, 3) \Rightarrow \frac{3!}{2!} = 3$$

$$\text{For } (1, 1, 5) \Rightarrow \frac{3!}{2!} = 3$$

$$\text{For } (1, 1, 2) \Rightarrow \frac{3!}{2!} = 3$$

$$\text{For } (3, 3, 1) \Rightarrow \frac{3!}{2!} = 3$$

$$\text{For } (5, 5, 3) \Rightarrow \frac{3!}{2!} = 3$$

$$\text{For } (2, 3, 5) \Rightarrow 3! = 6$$

$$\text{Total} = 21$$

27. If $5f(x+y) = f(x) \cdot f(y)$ and $f(3) = 320$, then the value of $f(1)$ is

Answer (20)

Sol. $5f(x+y) = f(x) \cdot f(y)$... (i) $f(3) = 320$

Put $x = 1, y = 2$ in (i)

$$5f(3) = f(1) \cdot f(2)$$

$$\Rightarrow f(1) \cdot f(2) = 5 \times 320 = 1600 \quad \dots (ii)$$

Put $x = y = 1$ in (i)

$$5f(2) = (f(1))^2$$

$$\Rightarrow f(2) = \frac{(f(1))^2}{5} \quad \dots (iii)$$

Using (iii) in (ii),

$$f(1) \cdot \frac{(f(1))^2}{5} = 1600$$

$$(f(1))^3 = 8000$$

$$f(1) = 20$$

28. If for $\log_{\cos x}(\cot x) - 4\log_{(\sin x)} \cot x = 1$,

$$x = \sin^{-1}\left(\frac{\alpha + \sqrt{\beta}}{2}\right). \text{ Find } (\alpha + \beta), \text{ given } x \in \left(0, \frac{\pi}{2}\right)$$

Answer (04.00)

Sol. $\log_{\cos x} \cot x - 4\log_{\sin x} \cot x = 1$

$$1 - \log_{\cos x} \sin x - 4(\log_{\sin x} \cos x - 1) = 1$$

Let $\log_{\cos x} \sin x = t$

$$-t - 4\left(\frac{1}{t} - 1\right) = 0$$

$$\Rightarrow t + \frac{4}{t} = 4$$

$$\Rightarrow t = 2$$

$$\log_{\cos x} \sin x = 2$$

$$\Rightarrow \cos^2 x = \sin x$$

$$\Rightarrow 1 - \sin^2 x - \sin x = 0$$

$$\Rightarrow \sin^2 x + \sin x - 1 = 0$$

So, $\sin x = \frac{-1 \pm \sqrt{5}}{2}$

$$\alpha = -1, \beta = 5$$

$$\alpha + \beta = 4$$

29.

30.

