



















Practice, Learn and Achieve  
Your Goal with Prepp

# SSC CHSL Exam

Tier I Previous Paper

Simplifying  
Government Exams

 SSC CHSL	 IAS EXAM	 RRB NTPC	 NTSE	 CDS
 SSC CGL	 CBSE UGC NET	 IBPS PO	 NDA	
 SBI PO	 IBPS CLERK	 AFCAT	 SSC JE	 CTET
 CSIR UGC NET	 CAPF	 IBPS RRB		

## Combined Higher Secondary Level Examination 2019 Tier I

Roll Number	
Candidate Name	
Venue Name	
Exam Date	19/10/2020
Exam Time	4:00 PM - 5:00 PM
Subject	CHSL Tier 1

Section : English Language (Basic Knowledge)

**Q.1** In the given sentence identify the segment which contains a grammatical error.

There are some members who haven't paid his subscription yet.

- Ans
- 1. some members
  - 2. There are
  - 3. his subscription yet
  - 4. who haven't paid

Question ID : 4244291115

Status : Answered

Chosen Option : 3

**Q.2** Select the most appropriate ANTONYM of the given word.

REVERED

- Ans
- 1. Despised
  - 2. Cherished
  - 3. Esteemed
  - 4. Valued

Question ID : 4244291127

Status : Answered

Chosen Option : 4

**Q.3** Four jumbled sentences are given. Select the option that gives their correct order.

- A. The middle sun was the one we usually see every day, but the ones on either side were the sun's smaller reflections.
- B. It looked like there were three suns in the sky.
- C. A local meteorological centre explained that reflection is caused by sunshine high in the sky and light passing through snow crystals in the air.
- D. A rare celestial phenomenon appeared in Mongolia.

- Ans
- 1. ACBD
  - 2. DBCA
  - 3. DBAC
  - 4. ADBC

Question ID : 4244291123

Status : Answered

Chosen Option : 1

Latest Sarkari Jobs, Govt Exam Results,  
Vacancies and updates on one click

Know More

**Q.4** Four jumbled sentences are given. Select the option that gives their correct order.

- A. Put equal quantities of water and milk in a sauce pan and keep it on the flame.  
 B. Now put some ginger, tea powder and sugar as per taste and boil it for a couple of minutes.  
 C. Tea is one of the most common Asian drinks and is very simple to make.  
 D. Turn off the flame, strain it into a cup and serve it hot.

- Ans  1. BCAD  
 2. CBAD  
 3. CABD  
 4. ABCD

Question ID : 4244291122

Status : Answered

Chosen Option : 3

**Comprehension:**

In the following passage some words have been deleted. Fill in the blanks with the help of the alternatives given. Select the most appropriate option for each blank.

The Ken Gharial Sanctuary is a wildlife sanctuary near Panna in Madhya Pradesh. It is part (1)\_\_\_\_\_ the Gharial Conservation association where captive bred gharials (2)\_\_\_\_\_ released to help regenerate the gharial ecosystem. (3)\_\_\_\_\_ is located at the Ken River, north of Panna National Park. Here you can also (4)\_\_\_\_\_ the majestic Raneh Falls on the Ken River. The Sanctuary is (5)\_\_\_\_\_ for visitors during monsoon season.

**SubQuestion No : 5**

**Q.5** Select the most appropriate option for blank number 1.

- Ans  1. with  
 2. in  
 3. at  
 4. of

Question ID : 4244291117

Status : Answered

Chosen Option : 4

**Comprehension:**

In the following passage some words have been deleted. Fill in the blanks with the help of the alternatives given. Select the most appropriate option for each blank.

The Ken Gharial Sanctuary is a wildlife sanctuary near Panna in Madhya Pradesh. It is part (1)\_\_\_\_\_ the Gharial Conservation association where captive bred gharials (2)\_\_\_\_\_ released to help regenerate the gharial ecosystem. (3)\_\_\_\_\_ is located at the Ken River, north of Panna National Park. Here you can also (4)\_\_\_\_\_ the majestic Raneh Falls on the Ken River. The Sanctuary is (5)\_\_\_\_\_ for visitors during monsoon season.

**SubQuestion No : 6**

**Q.6** Select the most appropriate option for blank number 2.

- Ans  1. are  
 2. was  
 3. had  
 4. is

Question ID : 4244291118

Status : Answered

Chosen Option : 1

Latest Sarkari Jobs, Govt Exam Results,  
Vacancies and updates on one click

Know More

**Comprehension:**

In the following passage some words have been deleted. Fill in the blanks with the help of the alternatives given. Select the most appropriate option for each blank.

The Ken Gharial Sanctuary is a wildlife sanctuary near Panna in Madhya Pradesh. It is part (1)\_\_\_\_\_ the Gharial Conservation association where captive bred gharials (2)\_\_\_\_\_ released to help regenerate the gharial ecosystem. (3)\_\_\_\_\_ is located at the Ken River, north of Panna National Park. Here you can also (4)\_\_\_\_\_ the majestic Raneh Falls on the Ken River. The Sanctuary is (5)\_\_\_\_\_ for visitors during monsoon season.

**SubQuestion No : 7**

**Q.7 Select the most appropriate option for blank number 3.**

- Ans
- 1. These
  - 2. This
  - 3. It
  - 4. That

Question ID : 4244291119

Status : Answered

Chosen Option : 3

**Comprehension:**

In the following passage some words have been deleted. Fill in the blanks with the help of the alternatives given. Select the most appropriate option for each blank.

The Ken Gharial Sanctuary is a wildlife sanctuary near Panna in Madhya Pradesh. It is part (1)\_\_\_\_\_ the Gharial Conservation association where captive bred gharials (2)\_\_\_\_\_ released to help regenerate the gharial ecosystem. (3)\_\_\_\_\_ is located at the Ken River, north of Panna National Park. Here you can also (4)\_\_\_\_\_ the majestic Raneh Falls on the Ken River. The Sanctuary is (5)\_\_\_\_\_ for visitors during monsoon season.

**SubQuestion No : 8**

**Q.8 Select the most appropriate option for blank number 4.**

- Ans
- 1. climb
  - 2. look
  - 3. regard
  - 4. see

Question ID : 4244291120

Status : Answered

Chosen Option : 4

**Comprehension:**

In the following passage some words have been deleted. Fill in the blanks with the help of the alternatives given. Select the most appropriate option for each blank.

The Ken Gharial Sanctuary is a wildlife sanctuary near Panna in Madhya Pradesh. It is part (1)\_\_\_\_\_ the Gharial Conservation association where captive bred gharials (2)\_\_\_\_\_ released to help regenerate the gharial ecosystem. (3)\_\_\_\_\_ is located at the Ken River, north of Panna National Park. Here you can also (4)\_\_\_\_\_ the majestic Raneh Falls on the Ken River. The Sanctuary is (5)\_\_\_\_\_ for visitors during monsoon season.

**SubQuestion No : 9**

**Q.9 Select the most appropriate option for blank number 5.**

- Ans
- 1. locked
  - 2. finished
  - 3. closed
  - 4. banned

Latest Sarkari Jobs, Govt Exam Results,  
Vacancies and updates on one click

Know More

4291121  
swered

Q.10 Select the word which means the same as the group of words given.

A small compartment in an aircraft for the pilot

- Ans
- 1. Chassis
  - 2. Cockpit
  - 3. Canopy
  - 4. Fuselage

Question ID : 4244291133

Status : Answered

Chosen Option : 2

Q.11 Select the correct indirect form of the given sentence.

Mother said to Avika, "Finish these sums before you go to the park."

- Ans
- 1. Mother told Avika to finish those sums before she goes to the park.
  - 2. Mother told Avika to finish those sums before she went to the park.
  - 3. Mother told Avika to finish these sums before you go to the park.
  - 4. Mother told Avika to finish those sums before she was going to the park.

Question ID : 4244291113

Status : Answered

Chosen Option : 2

Q.12 Select the INCORRECTLY spelt word.

- Ans
- 1. Vicious
  - 2. Deliceous
  - 3. Courageous
  - 4. Obvious

Question ID : 4244291131

Status : Answered

Chosen Option : 2

Q.13 Select the most appropriate option to substitute the underlined segment in the given sentence. If there is no need to substitute it, select 'No improvement'.

All the shops and restaurants have been closed during the bandh last Saturday.

- Ans
- 1. are being closed
  - 2. has been closed
  - 3. were closed
  - 4. No improvement

Question ID : 4244291124

Status : Answered

Chosen Option : 4

Q.14 Select the most appropriate option to substitute the underlined segment in the given sentence. If there is no need to substitute it, select 'No improvement'.

Avika understands French, does she?

- Ans
- 1. is she
  - 2. doesn't she
  - 3. isn't it
  - 4. No improvement

Question ID : 4244291125  
Status : Answered  
Chosen Option : 2

Q.15 Select the INCORRECTLY spelt word.

- Ans
- 1. Irreverent
  - 2. Irregular
  - 3. Irradicate
  - 4. Irrational

Question ID : 4244291130  
Status : Answered  
Chosen Option : 3

Q.16 Select the most appropriate meaning of the given idiom.

Cool it

- Ans
- 1. To be angry
  - 2. To wait
  - 3. To relax
  - 4. To be nervous

Question ID : 4244291128  
Status : Answered  
Chosen Option : 3

Q.17 Select the most appropriate synonym of the given word.

GLUM

- Ans
- 1. Bright
  - 2. Afraid
  - 3. Nervous
  - 4. Dismal

Question ID : 4244291134  
Status : Answered  
Chosen Option : 2

Q.18 Select the most appropriate word to fill in the blank in the given sentence.

When he came back home safe that night, everybody \_\_\_\_\_ a sigh of relief.

- Ans
- 1. raised
  - 2. exhaled
  - 3. heaved
  - 4. inhaled

Question ID : 4244291137  
Status : Answered  
Chosen Option : 2

Q.19 Select the most appropriate meaning of the given idiom.

Go off at a tangent

- Ans
- 1. Go on at great length
  - 2. Change the subject immediately
  - 3. Forget things in between
  - 4. Become boisterous

Question ID : 4244291129  
Status : Not Answered  
Chosen Option : --

Q.20 Select the correct passive form of the given sentence.

For reaching the station, they hired an auto.

- Ans
- 1. For reaching the station, an auto was being hired by them.
  - 2. For reaching the station, an auto had been hired by them.
  - 3. For reaching the station, an auto was hired by them.
  - 4. For reaching the station, an auto is hired by them.

Question ID : 4244291112  
Status : Answered  
Chosen Option : 3

Q.21 Select the most appropriate ANTONYM of the given word.

DECAY

- Ans
- 1. Decline
  - 2. Rotting
  - 3. Corrosion
  - 4. Growth

Question ID : 4244291126  
Status : Answered  
Chosen Option : 4

Q.22 Select the most appropriate word to fill in the blank in the given sentence.

Our professor speaks English with a \_\_\_\_\_ Oriya accent.

- Ans
- 1. vague
  - 2. pronounced
  - 3. widespread
  - 4. remarkable

Question ID : 4244291136  
Status : Answered  
Chosen Option : 1

Q.23 In the given sentence identify the segment which contains a grammatical error.

Someone have walked away with my umbrella.

- Ans
- 1. have walked
  - 2. Someone
  - 3. away with
  - 4. my umbrella

Question ID : 4244291114  
Status : Answered  
Chosen Option : 1

Q.24 Select the word which means the same as the group of words given.

A garden with fruit trees

- Ans
- 1. Vineyard
  - 2. Orchard
  - 3. Grove
  - 4. Nursery

Question ID : 4244291132  
Status : Answered  
Chosen Option : 4

Q.25 Select the most appropriate synonym of the given word.

OPULENT

- Ans
- 1. Economical
  - 2. Sumptuous
  - 3. Depressed
  - 4. Poor

Question ID : 4244291135  
Status : Not Answered  
Chosen Option : --

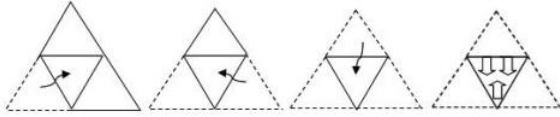
Section : General Intelligence

Latest Sarkari Jobs, Govt Exam Results,  
Vacancies and updates on one click

Know More

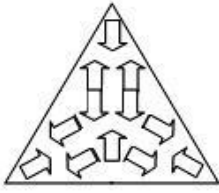


**Q.1** The sequence of folding a piece of paper and the manner in which the folded paper has been cut is shown in the following figures. How would this paper look when unfolded?

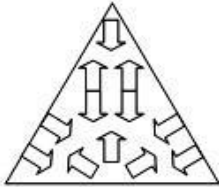


**Ans**

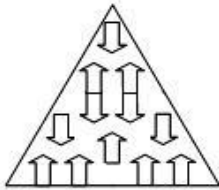
1.



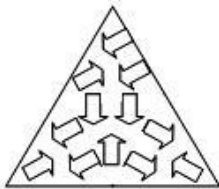
2.



3.



4.



Question ID : 4244291160  
Status : Answered  
Chosen Option : 2

**Q.2** Arrange the following words in a logical and meaningful order.

1. CFL bulb
2. Bulb
3. Lantern
4. Earthen lamp
5. LED bulb

1. 3-4-1-2-5

2. 4-3-1-2-5

3. 4-3-2-1-5

4. 3-4-2-1-5

Question ID : 4244291145  
Status : Answered  
Chosen Option : 3

Latest Sarkari Jobs, Govt Exam Results,  
Vacancies and updates on one click

Know More

**Q.3** Select the option that is related to the third letter-cluster in the same way as the second letter-cluster is related to the first letter-cluster.

RAMP : IZNK :: CEILING : ?

- Ans**  1. XVRORMT  
 2. XVTRPNL  
 3. WUQNQLS  
 4. YWSPSNU

Question ID : 4244291148

Status : Not Answered

Chosen Option : --

**Q.4** In a certain code language, a letter is coded by the letter at the same position but from the end of the English alphabet. then how the word MANGO will be written in that code language?

- Ans**  1. NZMTL  
 2. MNZLT  
 3. NMZLT  
 4. NMZTL

Question ID : 4244291152

Status : Answered

Chosen Option : 1

**Q.5** Select the option in which the numbers share the same relationship as that shared by the given pair of numbers.

132 : 12

- Ans**  1. 182 : 14  
 2. 224 : 15  
 3. 169 : 13  
 4. 240 : 15

Question ID : 4244291140

Status : Answered

Chosen Option : 1

**Q.6** Read the given statements and conclusions carefully. Assuming that the information given in the statements is true, even if it appears to be at variance with commonly known facts, decide which of the given conclusions logically follow(s) from the statements.

Statements:

All cars are mangoes  
 All buses are mangoes  
 Some apples are buses.

Conclusions:

- I. Some cars are buses.  
 II. Some mangoes are cars.  
 III. Some mangoes are apples.

- Ans**  1. Only conclusions I and II follow.  
 2. Only conclusions II and III follow.  
 3. Only conclusions I and III follow.  
 4. Only conclusion I follows.

Latest Sarkari Jobs, Govt Exam Results,  
 Vacancies and updates on one click

Know More

4291154  
 Answered

Q.7 Which two numbers need to be interchanged to make the following equation correct?

$$8 \times \left(\frac{4}{3}\right) + 9 - 5 = 10$$

- Ans
- 1. 9, 3
  - 2. 8, 4
  - 3. 4, 3
  - 4. 5, 3

Question ID : 4244291141  
Status : Answered  
Chosen Option : 3

Q.8 Which two numbers should be interchanged in the following equation to make it correct?

$$12 \times 2 + 8 - 48 \div 6 = 20$$

- Ans
- 1. 12 and 48
  - 2. 2 and 6
  - 3. 8 and 12
  - 4. 6 and 8

Question ID : 4244291139  
Status : Answered  
Chosen Option : 3

Q.9 Select the letter-cluster that can replace the question mark (?) in the following series.

STRAIN : TRAIN :: STABLE : ?

- Ans
- 1. TABLE
  - 2. ABLE
  - 3. BALES
  - 4. LABLE

Question ID : 4244291150  
Status : Answered  
Chosen Option : 1

Q.10 In a certain code language, CLOTH is written as LCPHT. How will GARMENT be written as in that language?

- Ans
- 1. AGMRTNE
  - 2. RAGMTNE
  - 3. RAGNTNE
  - 4. AGTNMRE

Question ID : 4244291146  
Status : Answered  
Chosen Option : 3

Q.11 Select the number that can replace the question mark (?) in the following series.





2, 10, 26, 50, 82, ?

- Ans
- 1. 120
  - 2. 124
  - 3. 122
  - 4. 114

Question ID : 4244291143  
Status : Answered  
Chosen Option : 3

Q.12 Select the correct mirror image of the given figure when the mirror is placed to the right side of the figure.

GKM#\$%NG24

- Ans
- 1. 
  - 2. 
  - 3. 
  - 4. 

Question ID : 4244291162  
Status : Answered  
Chosen Option : 2

Q.13 Select the letter-cluster that can replace the question mark (?) in the following series.

DFH, FHJ, ?, JLN, LNP

- Ans
- 1. HJL
  - 2. HJM
  - 3. HJK
  - 4. HKL

Question ID : 4244291151  
Status : Answered  
Chosen Option : 1

Q.14 The total of the ages of Ram, Shyam and Adil is 60 years. What was the total of their ages four years ago?

- Ans
- 1. 46 years
  - 2. 50 years
  - 3. 36 years
  - 4. 48 years

Question ID : 4244291144  
Status : Answered

Latest Sarkari Jobs, Govt Exam Results,  
Vacancies and updates on one click

Know More

**Q.15** Select the correct mirror image of the given figure when the mirror is placed to the right side of the figure.



**Ans**

- 1.
- 2.
- 3.
- 4.

Question ID : 4244291161  
 Status : Answered  
 Chosen Option : 4

**Q.16** Select the option figure that will come next in the following series.



**Ans**

- 1.
- 2.
- 3.
- 4.

Question ID : 4244291157  
 Status : Not Answered

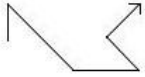
Latest Sarkari Jobs, Govt Exam Results, Vacancies and updates on one click [Know More](#)

**Q.17** There are 946 teachers and students in a school. If there is one teacher for every 42 students, then how many teachers are there in the school?

- Ans**
- 1. 20
  - 2. 23
  - 3. 21
  - 4. 22

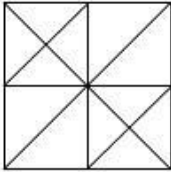
Question ID : **4244291138**  
 Status : **Answered**  
 Chosen Option : **4**

**Q.18** Select the option in which the given figure is embedded. (Rotation is not allowed)

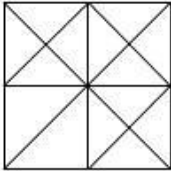


**Ans**

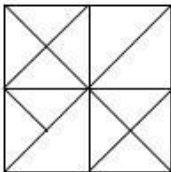
1.



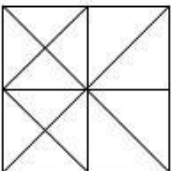
2.



3.



4.



Question ID : **4244291159**  
 Status : **Answered**  
 Chosen Option : **4**

**Q.19** 'Anemia' is related to 'Blood' in the same way as 'Hepatitis' is related to '\_\_\_\_\_ '.

- Ans**
- 1. Toxin
  - 2. Liver
  - 3. Inflammation
  - 4. Viral

Question ID : **4244291149**  
 Status : **Answered**  
 Chosen Option : **2**

**Q.20** Select the option in which the numbers are related in the same way as are the numbers of the following set.

(5, 8, 39)

- Ans  1. (13, 16, 88)  
 2. (11, 14, 74)  
 3. (9, 12, 63)  
 4. (6, 8, 44)

Question ID : 4244291142

Status : Not Answered

Chosen Option : --

**Q.21** A cube of 3"×3"×3" inch size was painted on all six sides and then cut into 27 smaller cubes of 1 inch size. How many smaller cubes will have only two sides painted?



- Ans  1. 12  
 2. 8  
 3. 10  
 4. 6

Question ID : 4244291158

Status : Not Answered

Chosen Option : --

**Q.22** Four letter-clusters have been given, out of which three are alike in some manner and one is different. Select the odd letter-cluster.

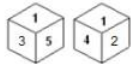
- Ans  1. TPMKJ  
 2. UQNLK  
 3. ROLIF  
 4. WSPNM

Question ID : 4244291153

Status : Answered

Chosen Option : 3

**Q.23** Two different positions of the same dice are shown. Select the number that will be on the face opposite to the face having number '3'.



- Ans  1. 2  
 2. 6  
 3. 4  
 4. 3

Question ID : 4244291156

Status : Answered

Latest Sarkari Jobs, Govt Exam Results,  
Vacancies and updates on one click

Know More

**Q.24** Read the given statements and conclusions carefully. Assuming that the information given in the statements is true, even if it appears to be at variance with commonly known facts, decide which of the given conclusions logically follow(s) from the statements.

**Statements:**

1. All bowls are plates.
2. No plate is a cup.

**Conclusions:**

- I. Only some bowls are cups.
- II. No bowl is a cup.

- Ans**
- 1. Both conclusions I and II follow.
  - 2. Only conclusion II follows.
  - 3. Only conclusion I follows.
  - 4. Neither conclusion I nor II follows.

Question ID : 4244291155

Status : Answered

Chosen Option : 2

**Q.25** If Rat is coded as 93 and Rabbit is coded as 25, then how will you code Horse?

- Ans**
- 1. 65
  - 2. 70
  - 3. 07
  - 4. 56

Question ID : 4244291147

Status : Answered

Chosen Option : 4

Section : Quantitative Aptitude(Basic Arithmetic Skill)

**Q.1** The following bar graph shows the sales (in thousands) of motor bikes by the factories, F1, F2, F3 and F4 in 2017, 2018 and 2019.



What is the ratio of total sales of F1 to that of F4 across all years?

- Ans**
- 1. 10 : 9
  - 2. 3 : 7
  - 3. 9 : 11
  - 4. 11 : 10

Question ID : 4244291187

Status : Answered

Chosen Option : 4

Latest Sarkari Jobs, Govt Exam Results,  
Vacancies and updates on one click

Know More



**Q.2** How much time (in minutes) will a dog take to run around a square field of side 75 m if it runs at the rate of 6 km/hr?

- Ans**
- 1. 2.5
  - 2. 3.6
  - 3. 3
  - 4. 1.8

Question ID : 4244291164  
Status : Answered  
Chosen Option : 3

**Q.3** 68 is 25% of which of the following numbers?

- Ans**
- 1. 272
  - 2. 285
  - 3. 204
  - 4. 136

Question ID : 4244291168  
Status : Answered  
Chosen Option : 1

**Q.4** The following bar graph shows the sales (in thousands) of motor bikes by the factories, F1, F2, F3 and F4 in 2017, 2018 and 2019.



Which factory had the highest sales across all the years?

- Ans**
- 1. F1
  - 2. F2
  - 3. F4
  - 4. F3

Question ID : 4244291184  
Status : Answered  
Chosen Option : 1

**Q.5** The measures of three angles of a triangle are in the ratio of 3 : 2 : 1. The triangle is a/an:

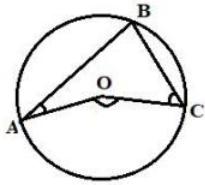
- Ans**
- 1. acute angled triangle
  - 2. obtuse angled triangle
  - 3. right angled triangle
  - 4. equilateral triangle

Question ID : 4244291174  
Status : Answered

Latest Sarkari Jobs, Govt Exam Results,  
Vacancies and updates on one click

Know More

Q.6 In the given figure, O is the centre of the circle. If  $\angle BAO = 30^\circ$  and  $\angle BCO = 50^\circ$ , then  $\angle AOC$  is equal to:



- Ans  1.  $160^\circ$   
 2.  $60^\circ$   
 3.  $40^\circ$   
 4.  $80^\circ$

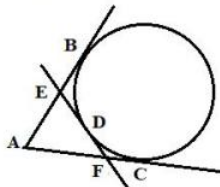
Question ID : 4244291173  
 Status : Not Answered  
 Chosen Option : --

Q.7 The equation of a straight line on a point  $(3, -5)$  and slope 2 is:

- Ans  1.  $2x - y - 11 = 0$   
 2.  $3x - 5y - 2 = 0$   
 3.  $5x - 2y + 3 = 0$   
 4.  $3x - 2y - 5 = 0$

Question ID : 4244291178  
 Status : Not Answered  
 Chosen Option : --

Q.8 In the given figure, AB, AC and EF are tangents to a circle. If AC = 15 cm and DE = 3 cm, then the length of AE is:



- Ans  1. 24 cm  
 2. 9 cm  
 3. 18 cm  
 4. 12 cm

Question ID : 4244291172  
 Status : Not Answered  
 Chosen Option : --

Q.9 The value of  $\sin^4\theta + \cos^4\theta + 2\sin^2\theta \cos^2\theta$  is:

- Ans  1. 1  
 2. 2  
 3. 4  
 4. 0

Latest Sarkari Jobs, Govt Exam Results,  
 Vacancies and updates on one click

Know More

Question ID : 424291183  
 Status : Answered  
 Chosen Option : 1

**Q.10** If a shopkeeper sells an item that is marked as ₹3,685 for ₹2,845, then how much discount is he offering?

- Ans  1. 22.795%  
 2. 29.52%  
 3. 26.59%  
 4. 34.87%

Question ID : 4244291167  
 Status : Answered  
 Chosen Option : 1

**Q.11** Prem purchased an old printer for ₹3,200 and spent ₹600 on its repair. He sold it for ₹4,280. His profit per cent is closest to: (correct upto two decimal places)

- Ans  1. 16.92%  
 2. 12.63%  
 3. 15.78%  
 4. 18.45%

Question ID : 4244291169  
 Status : Answered  
 Chosen Option : 2

**Q.12** Amir and Akbar can finish a task in 30 days and 15 days, respectively. Akbar worked on the task for 8 days and left the job. In how many days can Amir alone finish the remaining work?

- Ans  1. 14 days  
 2. 15 days  
 3. 16 days  
 4. 17 days

Question ID : 4244291163  
 Status : Answered  
 Chosen Option : 1

**Q.13** A library has an average of 265 visitors on Sundays and 130 visitors on other days. The average number of visitors per day in a month of 30 days beginning with a Monday is:

- Ans  1. 148  
 2. 135  
 3. 165  
 4. 129

Question ID : 4244291166  
 Status : Answered  
 Chosen Option : 1

**Q.14** A circle is drawn circumscribing a rectangle of sides 24 cm and 7 cm. Find the area of the circle. (Take  $\pi = 3.14$ )

- Ans  1. 490.625 cm<sup>2</sup>  
 2. 420.545 cm<sup>2</sup>  
 3. 397.982 cm<sup>2</sup>  
 4. 478.967 cm<sup>2</sup>

Latest Sarkari Jobs, Govt Exam Results,  
 Vacancies and updates on one click

Know More

Question ID : 4244291165  
 Status : Answered  
 Chosen Option : 1

**Q.15** The ratio of present ages (in years) of a father and son is 15 : 8. Six years ago, the ratio of their ages was 13 : 6. What is the father's present age?

- Ans
- 1. 65 years
  - 2. 58 years
  - 3. 45 years
  - 4. 78 years

Question ID : 4244291176  
Status : Answered  
Chosen Option : 3

**Q.16** If  $\sec A = \frac{5}{3}$ , then what is the value of  $\cot A$ ?

- Ans
- 1.  $\frac{3}{4}$
  - 2.  $\frac{4}{3}$
  - 3.  $\frac{4}{5}$
  - 4.  $\frac{3}{5}$

Question ID : 4244291181  
Status : Answered  
Chosen Option : 1

**Q.17** The ratio of the number of men and women in a factory is 14 : 19. If the total number of employees in the factory is 2145, then the number of women in the factory is:

- Ans
- 1. 1367
  - 2. 1976
  - 3. 1645
  - 4. 1235

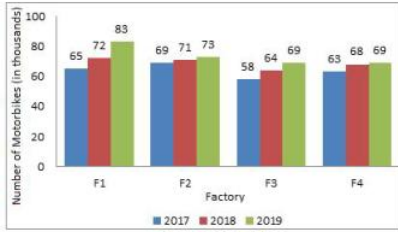
Question ID : 4244291170  
Status : Answered  
Chosen Option : 4

**Q.18** If  $x + \frac{1}{x} = 4$ , then find the value of  $x^4 + \frac{1}{x^4}$

- Ans
- 1. 136
  - 2. 194
  - 3. 162
  - 4. 128

Question ID : 4244291177  
Status : Answered  
Chosen Option : 2

**Q.19** The following bar graph shows the sales (in thousands) of motor bikes by the factories, F1, F2, F3 and F4 in 2017, 2018 and 2019.



Which factory had the least number of sales across all the years?

- Ans**
- 1. F2
  - 2. F3
  - 3. F1
  - 4. F4

Question ID : 4244291185

Status : Answered

Chosen Option : 2

**Q.20** The following bar graph shows the sales (in thousands) of motor bikes by the factories, F1, F2, F3 and F4 in 2017, 2018 and 2019.



Which of the factories witnessed the highest increase in the percentage of sales from 2018 to 2019?

- Ans**
- 1. F3
  - 2. F2
  - 3. F1
  - 4. F4

Question ID : 4244291186

Status : Answered

Chosen Option : 3

**Q.21** Three sides of a triangle measure 6 cm, 10 cm and x cm. The minimum integral value of x is:

- Ans**
- 1. 2
  - 2. 1
  - 3. 3
  - 4. 5

Question ID : 4244291175

Status : Answered

Chosen Option : 4

Latest Sarkari Jobs, Govt Exam Results,  
Vacancies and updates on one click

Know More

Q.22 What should be the value of N to make 396258N divisible by 8?

- Ans
- 1. 2
  - 2. 8
  - 3. 4
  - 4. 6

Question ID : 4244291179  
Status : Answered  
Chosen Option : 3

Q.23 If  $\cos A = 2 \sin A$ , then  $\operatorname{cosec} A$  is equal to:

- Ans
- 1.  $\frac{1}{2}$
  - 2.  $\frac{1}{\sqrt{5}}$
  - 3. 2
  - 4.  $\sqrt{5}$

Question ID : 4244291182  
Status : Answered  
Chosen Option : 4

Q.24 A man took a loan from a bank at the rate of 11 % p.a. simple interest. After three years, he had to pay ₹9,570 interest only for the period. The principal amount borrowed by him was:

- Ans
- 1. ₹27,685
  - 2. ₹26,545
  - 3. ₹25,000
  - 4. ₹29,000

Question ID : 4244291171  
Status : Answered  
Chosen Option : 4

Q.25 The value of  $1\frac{3}{4} - [3\frac{1}{8} \div \{6 - (2\frac{3}{4} - \frac{11}{12})\}]$  is:

- Ans
- 1. 1
  - 2. 2
  - 3. 3
  - 4. 0

Question ID : 4244291180  
Status : Not Answered  
Chosen Option : --

Section : General Awareness

Latest Sarkari Jobs, Govt Exam Results,  
Vacancies and updates on one click

Know More

**Q.1 Which of the following is an input device of a computer?**

- Ans
- 1. Speaker
  - 2. Printer
  - 3. Scanner
  - 4. Monitor

Question ID : 4244291188  
Status : Answered  
Chosen Option : 3

**Q.2 Who gave the slogans 'Dilli Chalo' and 'Give me blood and I will give you Freedom'?**

- Ans
- 1. Sardar Vallabh Bhai Patel
  - 2. Jawaharlal Nehru
  - 3. Mohandas Karamchand Gandhi
  - 4. Subhash Chandra Bose

Question ID : 4244291204  
Status : Answered  
Chosen Option : 4

**Q.3 Which of the following Indian classical dancers has been INCORRECTLY matched with her dance form?**

- Ans
- 1. Madhavi Mudgal – Orissi
  - 2. Nandini Singh – Kathak
  - 3. Radha Reddy – Kuchipudi
  - 4. Saswati Sen – Bharatanatyam

Question ID : 4244291191  
Status : Not Answered  
Chosen Option : --

**Q.4 Select the correctly matched pair of name of the company and its founder.**

- Ans
- 1. ITC – GD Birla
  - 2. Wipro – Mohammed Hashim Premji
  - 3. Infosys – Azim Premji
  - 4. Reliance – Mukesh Ambani

Question ID : 4244291196  
Status : Answered  
Chosen Option : 2

**Q.5 When are neap tides produced?**

- Ans
- 1. When the sun and moon are at right angle to the earth.
  - 2. When the sun partially contracts pull of the earth.
  - 3. When the earth and moon are in a straight line.
  - 4. When the sun lowers the gravitational pull of the moon.

Question ID : 4244291203  
Status : Not Answered

Latest Sarkari Jobs, Govt Exam Results,  
Vacancies and updates on one click

Know More

**Q.6 Which award is given to the best coach in sports and games?**

- Ans
- 1. Dhyan Chand award
  - 2. Dronacharya award
  - 3. Rajiv Gandhi Khel Ratna award
  - 4. Arjuna award

Question ID : 4244291210  
Status : Answered  
Chosen Option : 2

**Q.7 Which Indian English author was given the 'Jnanpith Award 2019'?**

- Ans
- 1. Nirad Choudhury
  - 2. Arundhati Roy
  - 3. Amitav Ghosh
  - 4. Jhumpa Lahiri

Question ID : 4244291207  
Status : Answered  
Chosen Option : 1

**Q.8 Who was the first president of Independent India?**

- Ans
- 1. Sarvapalli Radhakrishnan
  - 2. Rajendra Prasad
  - 3. Ram Nath Kovind
  - 4. Pranab Mukherjee

Question ID : 4244291208  
Status : Answered  
Chosen Option : 2

**Q.9 Which scientist/s proposed the theory of relativity?**

- Ans
- 1. Watson and Crick
  - 2. Albert Einstein
  - 3. John Dalton
  - 4. Charles Darwin

Question ID : 4244291197  
Status : Answered  
Chosen Option : 2

**Q.10 Which of the following places in India would you visit to see Mughal emperor Humayun's library?**

- Ans
- 1. Aurangabad
  - 2. Agra
  - 3. Aligarh
  - 4. New Delhi

Question ID : 4244291190  
Status : Answered

Latest Sarkari Jobs, Govt Exam Results,  
Vacancies and updates on one click

Know More



Q.11 Who among the following was given the 'Rajiv Gandhi Khel Ratna' award and which game did she/he excel in?

- Ans  1. Gagan Narang – Shooting  
 2. Sania Mirza – Table Tennis  
 3. Yogeshwar Dutt – Boxing  
 4. Ranjan Sodhi – Weightlifting

Question ID : 4244291212  
Status : Answered  
Chosen Option : 1

Q.12 The concepts of wages, rent, interest and profit are studied under which branch of economics?

- Ans  1. Macroeconomics  
 2. Microeconomics  
 3. Econometrics  
 4. Health economics

Question ID : 4244291195  
Status : Answered  
Chosen Option : 2

Q.13 Novak Djokovic defeated Rafael Nadal to help his country pick up the 'ATP Cup'. Which game do these players excel in?

- Ans  1. Lawn tennis  
 2. Badminton  
 3. Squash  
 4. Table tennis

Question ID : 4244291194  
Status : Answered  
Chosen Option : 1

Q.14 What is the name of the first research station in Antarctica built by the Government of India?

- Ans  1. Vaishali  
 2. Maitri  
 3. Bharati  
 4. Dakshin Gangotri

Question ID : 4244291201  
Status : Answered  
Chosen Option : 4

Q.15 Which of the following is NOT a portable device?

- Ans  1. iPods  
 2. Laptops  
 3. Desktop computers  
 4. Thumb drives

Latest Sarkari Jobs, Govt Exam Results,  
Vacancies and updates on one click

Know More

424291189  
Answered

Chosen Option : 3

Q.16 Which of the following abbreviations related to categories of Indian Civil Services is INCORRECT?

- Ans
- 1. IAS
  - 2. ICS
  - 3. IPS
  - 4. IFS

Question ID : 4244291209  
Status : Answered  
Chosen Option : 2

Q.17 Which of the following organs are NOT parts of the Alimentary canal?

- Ans
- 1. Colon and rectum
  - 2. Buccal cavity and Oesophagus
  - 3. Stomach and intestine
  - 4. Liver and pancreas

Question ID : 4244291199  
Status : Answered  
Chosen Option : 4

Q.18 At which of the following hill stations can tourists visiting in winter experience living in igloos?

- Ans
- 1. Nainital
  - 2. Shimla
  - 3. Kashmir
  - 4. Manali

Question ID : 4244291192  
Status : Answered  
Chosen Option : 3

Q.19 Vinesh Phogat is an ace Indian \_\_\_\_\_.

- Ans
- 1. Boxer
  - 2. Wrestler
  - 3. Sprinter
  - 4. Sumo Wrestler

Question ID : 4244291211  
Status : Answered  
Chosen Option : 2

Q.20 During the rule of Tipu Sultan, which was the capital city of his state Mysore?

- Ans
- 1. Bidar
  - 2. Srirangapatnam
  - 3. Madurai
  - 4. Bangalore

Question ID : 4244291205  
Status : Answered

Latest Sarkari Jobs, Govt Exam Results,  
Vacancies and updates on one click

Know More

Q.21 To which continent of the world do India, China and Japan belong?

- Ans
- 1. Asia
  - 2. Antarctica
  - 3. Africa
  - 4. Europe

Question ID : 4244291200  
Status : Answered  
Chosen Option : 1

Q.22 Jeff Bezos is the CEO of:

- Ans
- 1. Myntra
  - 2. Amazon
  - 3. Snapdeal
  - 4. Flipkart

Question ID : 4244291206  
Status : Answered  
Chosen Option : 2

Q.23 Organic compounds are compounds of the element \_\_\_\_\_.

- Ans
- 1. carbon
  - 2. lead
  - 3. silicon
  - 4. nitrogen

Question ID : 4244291198  
Status : Answered  
Chosen Option : 4

Q.24 The Char-Dham Highway Project will connect four holy places: Yamnotri, Gangotri, Kedarnath and Badrinath. To which Indian state do these places belong?

- Ans
- 1. Uttarakhand
  - 2. Madhya Pradesh
  - 3. Uttar Pradesh
  - 4. Jharkhand

Question ID : 4244291193  
Status : Answered  
Chosen Option : 1

Q.25 Which country is called the 'Coffee Bowl of the World'?

- Ans
- 1. Serbia
  - 2. Mexico
  - 3. India
  - 4. Brazil

Question ID : 4244291202  
Status : Answered

Latest Sarkari Jobs, Govt Exam Results,  
Vacancies and updates on one click

Know More



# Latest Sarkari jobs, Govt Exam alerts, Results and Vacancies

- ▶ Latest News and Notification
- ▶ Exam Paper Analysis
- ▶ Topic-wise weightage
- ▶ Previous Year Papers with Answer Key
- ▶ Preparation Strategy & Subject-wise Books

To know more [Click Here](#)



[www.prepp.in](http://www.prepp.in)