

**SSC
GD**

**Previous Year Paper
15 Dec 2021 Shift 1
English**

Exam Date	15/12/2021
Exam Time :	9:00 AM - 10:30 AM
Subject	Constable GD 2021

Section : Part A General Intelligence and Reasoning

Q.1 Study the given pattern carefully and select the number that can replace the question mark (?) in it.

14 12 15
11 17 16
180 234 ?

- Ans 1. 272
 2. 369
 3. 298
 4. 425

Question ID : 65497830770
Status : Answered
Chosen Option : 1

Q.2 In a certain code language, the word 'DISK' is written as 'LTJE'. How will 'SFWP' be written in that language?

- Ans 1. REVO
 2. TGXQ
 3. OVER
 4. QXGT

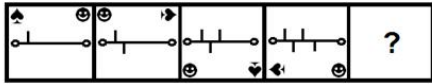
Question ID : 65497830768
Status : Answered
Chosen Option : 4

Q.3 'Monarch' is related to 'Butterfly' in the same way as 'Mamba' is related to '_____':


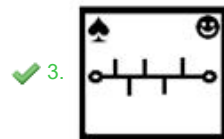
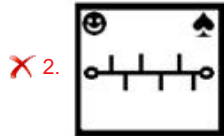
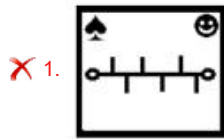
- Ans 1. Venom
 2. Snake
 3. Queen
 4. Royal

Question ID : 65497830765
Status : Answered
Chosen Option : 2

Q.4 Select the figure from among the given options that can replace the question mark (?) in the following series.



Ans



Question ID : 65497830776

Status : Answered

Chosen Option : 3

Q.5 Select the option that is related to the fourth number in the same way as the first number is related to the second number and the fifth number is related to the sixth number.

4523 : 22 :: ? : 14 :: 9178 : 13

Ans ✗ 1. 8228

✗ 2. 7448

✗ 3. 9152

✓ 4. 5440

Question ID : 65497830753

Status : Answered

Chosen Option : 2

Q.6 Select the correct option that indicates the arrangement of the given words in the order in which they appear in an English dictionary.

1. Congrats
2. Confusion
3. Confound
4. Congregate
5. Confucian

Ans ✗ 1. 3, 2, 5, 1, 4

✓ 2. 3, 5, 2, 1, 4

✗ 3. 3, 1, 4, 5, 2

✗ 4. 3, 4, 1, 5, 2

Question ID : 65497830773

Status : Answered

Chosen Option : 2

Q.7 A paper sheet is folded in a particular manner and several punches are made. When unfolded the paper sheet looks like the question figure. From the given options, select the figure that follows the manner in which the paper is folded and punched.

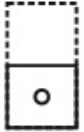


Ans

✓ 1.



✗ 2.



✗ 3.



✗ 4.



Question ID : 65497830772

Status : Answered

Chosen Option : 1

Q.8 Which two signs should be interchanged to make the given equation correct?

$$15 \times 6 + 132 - 11 \div 44 = 58$$

Ans ✗ 1. + and ×

✗ 2. + and ÷

✓ 3. ÷ and –

✗ 4. × and ÷

Question ID : 65497830754

Status : Answered

Chosen Option : 3

Q.9 Select the option that is related to the third letter-cluster in the same way as the second letter-cluster is related to the first letter-cluster.

PVSD : TYUE :: DPKR : ?

Ans ✗ 1. GTNS

✗ 2. HTMS

✓ 3. HSMS

✗ 4. ISNS

Question ID : 65497830757

Status : Answered

Chosen Option : 3

Q.10 Select the option in which the given figure is embedded (rotation is NOT allowed).



Ans

X 1.



X 2.



✓ 3.



X 4.



Question ID : 65497830756
Status : Answered
Chosen Option : 3

Q.11 Select the correct mirror image of the given figure when the mirror is placed at 'XY' as shown.



Ans

X 1.



X 2.



✓ 3.



X 4.



Question ID : 65497830763
Status : Answered
Chosen Option : 3

Q.12 Select the set of classes the relationship among which is best illustrated by the given Venn diagram.



- Ans
- 1. Citizen, Uneducated, Advocates
 - 2. Brothers, Cricketers, Men
 - 3. Sofa, Furniture, Book
 - 4. Sharks, Whales, Toads

Question ID : 65497830767
Status : Answered
Chosen Option : 1

Q.13 Five persons are sitting in a row. D and H are the two persons at the extreme end. L is to the right of P. T is to the left of the H. What is the position of L from the left?

- Ans
- 1. First
 - 2. Second
 - 3. Third
 - 4. Fourth

Question ID : 65497830766
Status : Answered
Chosen Option : 2

Q.14 Select the letter-cluster from among the given options that can replace the question mark (?) in the following series.

GLQ, VAF, KPU, ZEJ, ?

- Ans
- 1. OUZ
 - 2. OTY
 - 3. PTY
 - 4. PUY

Question ID : 65497830764
Status : Answered
Chosen Option : 2

Q.15 Select the number from among the given options that can replace the question mark (?) in the following series.

14, 14, 15, 23, 87, 212, ?

- Ans
- 1. 482
 - 2. 428
 - 3. 284
 - 4. 248

Question ID : 65497830775
Status : Answered
Chosen Option : 2

Q.16 Four letter-clusters have been given, out of which three are alike in some manner and one is different. Select the odd one.

- Ans 1. RNJF
 2. XTPL
 3. MIEA
 4. TPLI

Question ID : 65497830760
Status : Answered
Chosen Option : 4

Q.17 Select the number from among the given options that can replace the question mark (?) in the following series.

6, 5, 7, 7, 10, 11, 15, 17, ?

- Ans 1. 22
 2. 25
 3. 24
 4. 23

Question ID : 65497830762
Status : Answered
Chosen Option : 1

Q.18 Eight friends, A, B, C, D, E, F, G and H, are sitting clockwise around a circular table in the same sequence, facing the centre, at equal distance between them. C is facing the north direction. Now if D leaves his place and a new friend Y occupies D's place, then which of the following two persons are sitting opposite each other?

- Ans 1. Y and B
 2. C and H
 3. B and F
 4. F and A

Question ID : 65497830752
Status : Answered
Chosen Option : 3

Q.19 Pointing to Kiran, Rohan says, "She is the daughter of the only son of my grandfather." How is Kiran related to Rohan?

- Ans 1. Mother
 2. Daughter-in-law
 3. Wife
 4. Sister

Question ID : 65497830759
Status : Answered
Chosen Option : 4

Q.20 Select the combination of letters that when sequentially placed in the blanks of the given series will complete the series.

KP_LMK_TL_KPT_M_PT_M

- Ans 1. T, P, M, L, K, L
 2. P, K, L, T, M, L
 3. P, T, L, K, M, L
 4. T, P, L, M, L, K

Question ID : 65497830774
Status : Answered
Chosen Option : 1

Q.21 Read the given statements and conclusions carefully. Assuming that the information given in the statements is true, even if it appears to be at variance with commonly known facts, decide which of the given conclusions logically follow(s) from the statements.

Statements:

- I. All grills are ovens.
II. Some tandoors are grills.

Conclusions:

- I. Some tandoors are oven.
II. All ovens are tandoor.

- Ans 1. Only conclusion II follows.
 2. Only conclusion I follows.
 3. Both conclusions I and II follow.
 4. Neither conclusion I nor II follows.

Question ID : 65497830769
Status : Answered
Chosen Option : 4

Q.22 In a certain code language, MORALE is coded as 1315181125. How will VALUES be coded in that language?

- Ans 1. 2211221519
 2. 1951221122
 3. 2121212519
 4. 1125185131

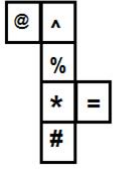
Question ID : 65497830761
Status : Answered
Chosen Option : 1

Q.23 In a certain code language, 'HEROIC' is written as 'KBULLZ'. How will 'VALIANT' be written in that language?

- Ans 1. YXOLXQQ
 2. YXOFDKW
 3. YXOEDLW
 4. TCJLYPS

Question ID : 65497830758
Status : Answered
Chosen Option : 2

Q.24 A cube is made by folding the given sheet. In the cube so formed, which pair of symbols will be on opposite faces?



- Ans
- 1. # and =
 - 2. @ and %
 - 3. @ and =
 - 4. % and *

Question ID : 65497830755
Status : Answered
Chosen Option : 3

Q.25 How many terms of the series 53, 57, 61, 65 Need to be taken so that their sum is 1106?

- Ans
- 1. 15
 - 2. 20
 - 3. 14
 - 4. 21

Question ID : 65497830771
Status : Answered
Chosen Option : 3

Section : Part B General Knowledge and General Awareness

Q.1 In which year was the Sahitya Akademi Award started?

- Ans
- 1. 1955
 - 2. 1954
 - 3. 1956
 - 4. 1953

Question ID : 65497830790
Status : Answered
Chosen Option : 3

Q.2 In which year was the English Education Act introduced to make English the medium of instruction for higher education and to stop the promotion of oriental institutions?

- Ans
- 1. 1835
 - 2. 1830
 - 3. 1854
 - 4. 1833

Question ID : 65497830785
Status : Answered
Chosen Option : 1

Q.3 Who among the following sportspersons received the prestigious Rajiv Gandhi Khel Ratna Award in August 2020?

- Ans 1. Atanu Das
 2. Mariyappan T
 3. Naresh Kumar
 4. Romesh Pathania

Question ID : 65497830801
Status : Answered
Chosen Option : 2

Q.4 Which of the following insects has a pigment called 'luciferin'?

- Ans 1. Butterfly
 2. Redfly
 3. Nightfly
 4. Firefly

Question ID : 65497830779
Status : Answered
Chosen Option : 3

Q.5 Who was appointed as the director of the Indian National Centre for Ocean Information System in 2020?

- Ans 1. Vinay Mohan Kwatra
 2. Srinivasa Kumar Tummala
 3. BV Satyanarayana
 4. S Nageswara Rao

Question ID : 65497830787
Status : Answered
Chosen Option : 4

Q.6 Which of the following is a water-borne disease?

- Ans 1. Cholera
 2. Common cold
 3. Mumps
 4. Pneumonia

Question ID : 65497830797
Status : Answered
Chosen Option : 1

Q.7 Which among the following became the first Indian Airport to launch an e-boarding facility for passengers on International flights?

- Ans 1. GMR Hyderabad International Airport
 2. Indira Gandhi International Airport, Delhi
 3. Sardar Vallabhbhai Patel International Airport, , Gujarat
 4. Dabolim Airport, Goa

Question ID : 65497830793
Status : Answered
Chosen Option : 2

Q.8 Which of the following terms is used to describe the outside layer of skin on the human body?

- Ans
- 1. Keratin
 - 2. Larynx
 - 3. Epidermis
 - 4. Quadriceps

Question ID : 65497830778
Status : Answered
Chosen Option : 3

Q.9 In Australian Open 2020 Tennis Tournament who won the Men's Singles title?

- Ans
- 1. Rafael Nadal
 - 2. Dominic Thiem
 - 3. Alexander Zverev
 - 4. Novak Djokovic

Question ID : 65497830783
Status : Answered
Chosen Option : 4

Q.10 Salal Hydroelectric Power Station is built on which of the following rivers?

- Ans
- 1. Chenab
 - 2. Bhagirathi
 - 3. Jhelum
 - 4. Kosi

Question ID : 65497830800
Status : Answered
Chosen Option : 3

Q.11 The Cabinet Committee on Economic Affairs (CCEA) announced the highest increase in (MSP) for _____ for the Rabi Marketing Season 2020-21.

- Ans
- 1. wheat
 - 2. mustard
 - 3. barley
 - 4. lentil

Question ID : 65497830794
Status : Answered
Chosen Option : 1

Q.12 The 'Pattachitra' style of painting is a popular art form associated with the state of:

- Ans
- 1. Bihar
 - 2. Rajasthan
 - 3. Odisha
 - 4. Uttar Pradesh

Question ID : 65497830777
Status : Answered
Chosen Option : 1

Q.13 Which of the following is a famous Tamil epic composed by Ilango in ancient India?

- Ans 1. Shishupala Vadha
 2. Silappadikaram
 3. Aitareya Brahmana
 4. Ramacharitam

Question ID : 65497830798
Status : Not Answered
Chosen Option : --

Q.14 In October 2020, investment promotion and facilitation agency Guidance partnered with World Economic Forum (WEF) to establish India's first advanced manufacturing hub (AMHUB) in the state of _____.

- Ans 1. Tamil Nadu
 2. Karnataka
 3. Kerala
 4. Andhra Pradesh

Question ID : 65497830799
Status : Answered
Chosen Option : 1

Q.15 SLR determines the amount of money a bank needs to invest in certain specified securities, which are predominantly securities issued by the central and state governments. What is the full form of SLR?

- Ans 1. Statutory Liquidity Reserve
 2. Statutory Liquidity Ratio
 3. Statement Liquidity Ratio
 4. Statutory Liquidity Rate

Question ID : 65497830781
Status : Answered
Chosen Option : 4

Q.16 Which Indian player won the BBC Indian Sportswoman of the Year 2019?

- Ans 1. Manasi Joshi
 2. PV Sindhu
 3. Mary Kom
 4. Vinesh Phogat

Question ID : 65497830791
Status : Answered
Chosen Option : 2

Q.17 According to the Constitution of India, which of the following statements is correct?

- Ans 1. The Legislature is a small group of people.
 2. The Executive refers to our elected representatives.
 3. The Legislature, Executive and the Judiciary should exercise same powers.
 4. The Judiciary refers to the system of courts in the country.

Question ID : 65497830792
Status : Answered
Chosen Option : 4

Q.18 The Nobel Peace Prize 2020 was awarded to:

- Ans 1. International Monetary Fund
 2. Amnesty International
 3. World Food Programme
 4. World Health Organization

Question ID : 65497830780
Status : Answered
Chosen Option : 3

Q.19 A 'charkha' was placed at the centre of the tricolour flag of the Indian National Congress adopted in the year _____.

- Ans 1. 1929
 2. 1931
 3. 1938
 4. 1926

Question ID : 65497830795
Status : Answered
Chosen Option : 3

Q.20 What was India's rank in the Emerging Green Bond Market as per Economic Survey 2019-20?

- Ans 1. First
 2. Fourth
 3. Second
 4. Third

Question ID : 65497830796
Status : Answered
Chosen Option : 4

Q.21 Dashain is a famous festival which originated from _____.

- Ans 1. Myanmar
 2. India
 3. Nepal
 4. Bhutan

Question ID : 65497830788
Status : Answered
Chosen Option : 3

Q.22 Which of the following is India's highest (tallest) dam?

- Ans 1. Sardar Sarovar Dam, Gujarat
 2. Hirakud Dam, Odisha
 3. Tehri Dam, Uttarakhand
 4. Bhakra Nangal Dam, Himachal Pradesh

Question ID : 65497830782
Status : Answered
Chosen Option : 3

Q.23 How many fundamental rights and fundamental duties are prescribed in the Constitution of India?

- Ans
- 1. Seven and eleven, respectively
 - 2. Seven and ten, respectively
 - 3. Six and eleven, respectively
 - 4. Eight and ten, respectively

Question ID : 65497830786
Status : Answered
Chosen Option : 3

Q.24 In 1977, the Government of Bengal erected its first statue dedicated to a female freedom fighter in Kolkata Maidan. What was her name?

- Ans
- 1. Aruna Asaf Ali
 - 2. Matangini Hazra
 - 3. Kanaklata Barua
 - 4. Bh ka ji Cama

Question ID : 65497830784
Status : Answered
Chosen Option : 2

Q.25 In which year did India sign an agreement with International Seabed Authority for exploratory mining?

- Ans
- 1. 2000
 - 2. 2002
 - 3. 2003
 - 4. 2001

Question ID : 65497830789
Status : Not Answered
Chosen Option : --

Section : Part C Elementary Mathematics

Q.1 4 years ago, the average age of a family of 4 members was 19 years. A baby having been born, the average age of the family is the same today. Find the present age of the baby.

- Ans
- 1. 4 years
 - 2. 2 years
 - 3. 1 year
 - 4. 3 years

Question ID : 65497830814
Status : Answered
Chosen Option : 3

Q.2 The average of 9 numbers is 51. Average of three of them is 49 and average of four of the remaining numbers is 46. What is the average of the remaining numbers?

- Ans
- 1. 54
 - 2. 64
 - 3. 63
 - 4. 62.5

Question ID : 65497830803
Status : Answered
Chosen Option : 2

Q.3 The marked price of a bed sheet was ₹750. A man bought the bed sheet for ₹560 after getting two successive discounts of which the first was 16%. How much was the second discount?

- Ans
- 1. $11\frac{1}{2}\%$
 - 2. $11\frac{1}{9}\%$
 - 3. $11\frac{1}{4}\%$
 - 4. $11\frac{4}{3}\%$

Question ID : 65497830815
Status : Answered
Chosen Option : 2

Q.4 Find the value of $3 + \left\{1 + \frac{1}{3} - (3 - 4 \div 3) + \frac{1}{4} + \frac{2}{3}\right\}$.

- Ans
- 1. $\frac{7}{3}$
 - 2. $\frac{11}{12}$
 - 3. $\frac{43}{12}$
 - 4. $\frac{4}{3}$

Question ID : 65497830824
Status : Answered
Chosen Option : 3

Q.5 Kelvin and Kim can together finish a work in 25 days. They worked together for 15 days and then Kim left. After that, Kelvin finished the remaining work in 12 days. In how many days, can Kelvin alone finish the work?

- Ans
- 1. 39
 - 2. 34
 - 3. 36
 - 4. 30

Question ID : 65497830817
Status : Answered
Chosen Option : 4

Q.6 The price of an article increases by 10% every year. If the difference between its price at the end of the first year and third year is ₹69.30, then its price (in ₹) at the end of fourth year will be:

- Ans**
- 1. 363.00
 - 2. 441.93
 - 3. 399.30
 - 4. 439.23

Question ID : 65497830820
Status : Answered
Chosen Option : 4

Q.7 A tradesman marks his goods 20% above the cost price and allows his customers 10% reduction on their bills. What percentage profit does he make?

- Ans**
- 1. 7%
 - 2. 9%
 - 3. 5%
 - 4. 8%

Question ID : 65497830808
Status : Answered
Chosen Option : 4

Q.8 A vendor bought 25 dozen fruits for ₹3,750. Out of these, 50 fruits were rotten and therefore thrown away. At what rate per dozen (in ₹) should he sell the remaining to gain 20% in the entire transaction?

- Ans**
- 1. 216
 - 2. 180
 - 3. 192
 - 4. 204

Question ID : 65497830826
Status : Answered
Chosen Option : 1

Q.9 The HCF of 552, 759 and 828 is x . The value of x lies between:

- Ans**
- 1. 65 and 70
 - 2. 60 and 65
 - 3. 55 and 60
 - 4. 70 and 75

Question ID : 65497830819
Status : Answered
Chosen Option : 1

Q.10 The average attendance at a cricket stadium increased by 15% in 2012 in comparison to the previous year. If 2160 more people came to see the matches in 2012, how many came in 2011?

- Ans
- 1. 24000
 - 2. 14400
 - 3. 15000
 - 4. 32400

Question ID : 65497830816
Status : Answered
Chosen Option : 2

Q.11 A sum of ₹7,560 is divided between A, B and C such that if their shares are diminished by ₹400, ₹300 and ₹260, respectively, then their shares are in the ratio 4 : 2 : 5. What is the original share (in ₹) of C?

- Ans
- 1. 2,800
 - 2. 1,500
 - 3. 3,260
 - 4. 6,600

Question ID : 65497830806
Status : Answered
Chosen Option : 3

Q.12 The ratio of the present ages of A and B is 8 : 15. After four years from now, their ages will be in the ratio 9 : 16. What will be the sum of their ages (in years) after 8 years from now?

- Ans
- 1. 116
 - 2. 108
 - 3. 100
 - 4. 98

Question ID : 65497830821
Status : Answered
Chosen Option : 2

Q.13 A shopkeeper marks his goods at 20% above the cost price and gives two successive discounts of 5% and 10%. The gain percentage is:

- Ans
- 1. 2.3%
 - 2. 3%
 - 3. 1.8%
 - 4. 2.6%

Question ID : 65497830813
Status : Answered
Chosen Option : 4

Q.14 The area of a rectangular garden is 432 m^2 . The perimeter (in m) of the rectangular garden whose length is 6 m more than its width is:

- Ans**
- 1. 84
 - 2. 108
 - 3. 42
 - 4. 96

Question ID : **65497830807**
Status : **Answered**
Chosen Option : **1**

Q.15 If A bought an item for ₹384 and sold for ₹527, and B bought another item for ₹1,264 and sold for ₹1,724, whose gain percentage is more and by how much approximately?

- Ans**
- 1. A by 1.63%
 - 2. B by 1.54%
 - 3. A by 0.84%
 - 4. B by 0.65%

Question ID : **65497830811**
Status : **Answered**
Chosen Option : **4**

Q.16 Sheena owned 4 plants on which fresh flowers come every 2nd, 3rd, 4th and 6th day, respectively. If on Tuesday, fresh flowers came on all the four plants, then on which day will fresh flowers come on all the four plants at the earliest?

- Ans**
- 1. Tuesday
 - 2. Sunday
 - 3. Monday
 - 4. Thursday

Question ID : **65497830802**
Status : **Answered**
Chosen Option : **2**

Q.17 A can complete a task in 15 days and B can do it in 20 days. What is their one day work together?

- Ans**
- 1. $\frac{8}{15}$
 - 2. $\frac{7}{15}$
 - 3. $\frac{7}{60}$
 - 4. $\frac{9}{65}$

Question ID : **65497830812**
Status : **Answered**
Chosen Option : **3**

Q.18 अनिल ने Y शहर से X शहर के लिए 4.20 a.m. बजे प्रस्थान किया। उसने पहले 1 h 30 min तक 70 km/h की गति से यात्रा की। उसके बाद, गति को घटाकर 50 km/h कर दिया। यदि दोनों शहरों के बीच की दूरी 240 km थी, तो अनिल कितने बजे X शहर पहुंचा?

- Ans**
- 1. 7.25 a.m.
 - 2. 10.24 a.m.
 - 3. 8.32 a.m.
 - 4. 9.45 a.m.

Question ID : 65497830818
Status : Answered
Chosen Option : 3

Q.19 The diameter of the base of a right circular cone is 60 cm and its height is 16 cm. The curved surface area (in cm^2) of the cone is:

- Ans**
- 1. 960π
 - 2. 1020π
 - 3. 1054π
 - 4. 1088π

Question ID : 65497830823
Status : Answered
Chosen Option : 2

Q.20 $3 \times 6 + 8 - 6 \div 3 + 9$ is equal to:

- Ans**
- 1. 12
 - 2. 45
 - 3. 21
 - 4. 33

Question ID : 65497830810
Status : Answered
Chosen Option : 4

Q.21 A man travels from A to B at a speed of 20 km/h and returns by increasing his speed by 50%. What is his average speed for both the trips?

- Ans**
- 1. 40 km/h
 - 2. 48 km/h
 - 3. 24 km/h
 - 4. 36 km/h

Question ID : 65497830825
Status : Answered
Chosen Option : 3

Q.22 ₹16,000 धनराशि को 2 वर्ष के लिए 20% वार्षिक चक्रवृद्धि ब्याज दर पर उधार दिया जाता है। ब्याज यदि वार्षिक रूप में चक्रवृद्धि होने के बजाये अर्धवार्षिक रूप से चक्रवृद्धि होता, तो ब्याज के रूप में ₹x अधिक प्राप्त होते। x का मान कितना है?

- Ans
- 1. ₹378.20
 - 2. ₹365.40
 - 3. ₹372.80
 - 4. ₹385.60

Question ID : 65497830822
Status : Answered
Chosen Option : 4

Q.23 The monthly salaries of A, B and C are in the ratio 7 : 8 : 11. If the monthly salary of B is ₹3,600 less than that of C, then what is the annual salary (in ₹) of A?

- Ans
- 1. 8,40,000
 - 2. 1,00,800
 - 3. 6,30,000
 - 4. 3,15,000

Question ID : 65497830804
Status : Answered
Chosen Option : 1

Q.24 The simple interest on a certain sum of money for 2 years at 12% per annum is ₹60 less than the simple interest on the same sum for 3 years at 10% per annum. The sum (in ₹) is:

- Ans
- 1. ₹1,400
 - 2. ₹900
 - 3. ₹1,200
 - 4. ₹1,000

Question ID : 65497830809
Status : Answered
Chosen Option : 4

Q.25 If the compound interest on a certain sum for two years at 10% per annum compounded annually is ₹3,360, then what is the sum?

- Ans
- 1. ₹16,500
 - 2. ₹16,000
 - 3. ₹15,000
 - 4. ₹15,500

Question ID : 65497830805
Status : Answered
Chosen Option : 2

Q.1 Select the most appropriate meaning of the given idiom.

Maiden speech

- Ans 1. Unprepared speech
 2. First speech
 3. Last speech
 4. Madam's speech

Question ID : 65497830835
Status : Answered
Chosen Option : 2

Q.2 Select the most appropriate ANTONYM of the given word.

Dispute

- Ans 1. Trouble
 2. Confusion
 3. Doubt
 4. Agreement

Question ID : 65497830836
Status : Answered
Chosen Option : 4

Q.3 The following sentence has been divided into parts. One of them may contain an error. Select the part that contains the error from the given options. If you don't find any error, mark 'No error' as your answer.

By this time tomorrow / we will have / reached to Delhi.

- Ans 1. we will have
 2. No error
 3. By this time tomorrow
 4. reached to Delhi

Question ID : 65497830841
Status : Answered
Chosen Option : 1

Q.4 Select the most appropriate meaning of the given idiom.

A dime a dozen

- Ans 1. Something which can be bought only in dozens
 2. Something which is not expensive
 3. Something very common or of little value
 4. Something which costs a dime

Question ID : 65497830839
Status : Answered
Chosen Option : 3

Q.5 Select the most appropriate option to fill in the blank.

The situation became _____ after the scuffle between the farmers and the police.

- Ans 1. sad
 2. serious
 3. funny
 4. smooth

Question ID : 65497830829
Status : Answered
Chosen Option : 4

Q.6 Select the most appropriate ANTONYM of the given word.

INVERT

- Ans 1. Straighten
 2. Reverse
 3. Upset
 4. Lean

Question ID : 65497830842
Status : Answered
Chosen Option : 1

Q.7 Select the most appropriate option that can substitute the underlined segment in the given sentence. If there is no need to substitute it, select 'No substitution required'.

The farmer walked beside his bulls, isn't it?

- Ans 1. didn't he
 2. did he
 3. No substitution required
 4. didn't they

Question ID : 65497830827
Status : Answered
Chosen Option : 1

Q.8 Select the most appropriate synonym of the given word.

Recover

- Ans 1. Remain
 2. Regain
 3. Refrain
 4. Retain

Question ID : 65497830833
Status : Answered
Chosen Option : 2

Q.9 Select the most appropriate option to fill in the blank.

Mother's back was too _____ to work any longer, so she lay down to rest.

- Ans
- 1. sick
 - 2. sour
 - 3. sore
 - 4. soft

Question ID : 65497830846
Status : Answered
Chosen Option : 1

Q.10 Select the INCORRECTLY spelt word.

- Ans
- 1. Freeze
 - 2. Freind
 - 3. Frigid
 - 4. Fright

Question ID : 65497830828
Status : Answered
Chosen Option : 2

Q.11 Select the most appropriate option to fill in the blank.

War and Peace is a _____ written by Leo Tolstoy.

- Ans
- 1. celebrated
 - 2. notable
 - 3. distinguished
 - 4. masterpiece

Question ID : 65497830830
Status : Answered
Chosen Option : 3

Q.12 The following sentence has been split into four segments. Identify the segment that contains a grammatical error.

The children were / bubbling with excitement / at the thought of / seeing sea.

- Ans
- 1. bubbling with excitement
 - 2. The children were
 - 3. at the thought of
 - 4. seeing sea

Question ID : 65497830837
Status : Answered
Chosen Option : 4

Q.13 Select the most appropriate synonym of the given word.

Remedial

- Ans 1. Superficial
 2. Corrective
 3. Harmful
 4. Medicinal

Question ID : 65497830838
Status : Answered
Chosen Option : 2

Q.14 Select the option that can be used as a one-word substitute for the given group of words.

An area where fruit trees are grown

- Ans 1. Field
 2. Orchard
 3. Garden
 4. Farm

Question ID : 65497830831
Status : Answered
Chosen Option : 2

Q.15 Select the option that can be used as a one-word substitute for the given group of words.

A means of altering one's appearance to conceal one's identity

- Ans 1. Distort
 2. Disguise
 3. Drape
 4. Dress

Question ID : 65497830840
Status : Answered
Chosen Option : 2

Q.16 Select the most appropriate option that can substitute the underlined segment in the given sentence.If there is no need to substitute it, select 'No substitution required'.

If we are not clear about the exact meaning of a word, we should look into a dictionary.

- Ans 1. look on
 2. look to
 3. look of
 4. look up

Question ID : 65497830834
Status : Answered
Chosen Option : 1

Q.17 Select the **INCORRECTLY** spelt word.

- Ans 1. Assistance
 2. Exchanged
 3. Curious
 4. Participant

Question ID : 65497830844
Status : Answered
Chosen Option : 1

Q.18 Select the most appropriate option that can substitute the underlined segment in the given sentence. If there is no need to substitute it, select 'No substitution required'.

Please don't confuse me by giving so many different directions.

- Ans 1. by give so many
 2. No substitution required
 3. with giving so many
 4. by giving so much

Question ID : 65497830845
Status : Answered
Chosen Option : 1

Q.19 The following sentence has been split into four segments. Identify the segment that contains a grammatical error.

The penalty for / not wear masks / in public places / should be increased.

- Ans 1. The penalty for
 2. should be increased
 3. in public places
 4. not wear masks

Question ID : 65497830832
Status : Answered
Chosen Option : 4

Q.20 Select the option that can be used as a one-word substitute for the given group of words.

To reduce to a shorter form intended to stand for the whole

- Ans 1. Abbreviate
 2. Shrink
 3. Protract
 4. Extend

Question ID : 65497830843
Status : Answered
Chosen Option : 1

Comprehension:

In the following passage, some words have been deleted. Read the passage carefully and select the most appropriate option to fill in each blank.

Technology has made our lives simple and fast. The biggest (1)_____ has been the development of the internet. The internet is a (2)_____ of technology. It has brought us closer and people sitting at (3)_____ corners of the world can easily communicate. It facilitates shopping, money (4)_____, online learning etc. Cybercrimes are a result of the misuse of the internet. Children's (5)_____ to online games is another major problem faced by parents today.

SubQuestion No : 21

Q.21 Select the most appropriate option to fill in blank no. 1.

- Ans
- 1. supply
 - 2. value
 - 3. hindrance
 - 4. contribution

Question ID : 65497830848
Status : Answered
Chosen Option : 4

Comprehension:

In the following passage, some words have been deleted. Read the passage carefully and select the most appropriate option to fill in each blank.

Technology has made our lives simple and fast. The biggest (1)_____ has been the development of the internet. The internet is a (2)_____ of technology. It has brought us closer and people sitting at (3)_____ corners of the world can easily communicate. It facilitates shopping, money (4)_____, online learning etc. Cybercrimes are a result of the misuse of the internet. Children's (5)_____ to online games is another major problem faced by parents today.

SubQuestion No : 22

Q.22 Select the most appropriate option to fill in blank no. 2.

- Ans
- 1. favour
 - 2. asset
 - 3. boon
 - 4. burden

Question ID : 65497830849
Status : Answered
Chosen Option : 3

Comprehension:

In the following passage, some words have been deleted. Read the passage carefully and select the most appropriate option to fill in each blank.

Technology has made our lives simple and fast. The biggest (1)_____ has been the development of the internet. The internet is a (2)_____ of technology. It has brought us closer and people sitting at (3)_____ corners of the world can easily communicate. It facilitates shopping, money (4)_____, online learning etc. Cybercrimes are a result of the misuse of the internet. Children's (5)_____ to online games is another major problem faced by parents today.

SubQuestion No : 23

Q.23 Select the most appropriate option to fill in blank no. 3.

- Ans
- 1. distant
 - 2. farther
 - 3. further
 - 4. near

Question ID : 65497830850
Status : Answered
Chosen Option : 4

Comprehension:

In the following passage, some words have been deleted. Read the passage carefully and select the most appropriate option to fill in each blank.

Technology has made our lives simple and fast. The biggest (1)_____ has been the development of the internet. The internet is a (2)_____ of technology. It has brought us closer and people sitting at (3)_____ corners of the world can easily communicate. It facilitates shopping, money (4)_____, online learning etc. Cybercrimes are a result of the misuse of the internet. Children's (5)_____ to online games is another major problem faced by parents today.

SubQuestion No : 24

Q.24 Select the most appropriate option to fill in blank no. 4.

- Ans 1. transactions
 2. business
 3. contracts
 4. sites

Question ID : 65497830851
Status : Answered
Chosen Option : 1

Comprehension:

In the following passage, some words have been deleted. Read the passage carefully and select the most appropriate option to fill in each blank.

Technology has made our lives simple and fast. The biggest (1)_____ has been the development of the internet. The internet is a (2)_____ of technology. It has brought us closer and people sitting at (3)_____ corners of the world can easily communicate. It facilitates shopping, money (4)_____, online learning etc. Cybercrimes are a result of the misuse of the internet. Children's (5)_____ to online games is another major problem faced by parents today.

SubQuestion No : 25

Q.25 Select the most appropriate option to fill in blank no. 5.

- Ans 1. desire
 2. interest
 3. addiction
 4. indifference

Question ID : 65497830852
Status : Answered
Chosen Option : 3

Section : Part D Hindi

Q.1 'जो पढ़ने में रोचक लगे' वाक्यांश के लिए एक शब्द होगा-

- Ans 1. दर्शनीय
 2. गद्य
 3. पठनीय
 4. पद्य

Question ID : 65497830870
Status : Not Answered
Chosen Option : --

Q.2 निम्न मुहावरे का अर्थ व्यक्त करने वाले विकल्प का चयन कीजिए।

होश उड़ना

- Ans 1. डर जाना
 2. अयोग्य होना
 3. सपने देखना
 4. सफल होना

Question ID : 65497830864
Status : Not Answered
Chosen Option : --

Q.3 सही वर्तनी वाले शब्द का चयन कीजिए।

- Ans 1. परलौकिक
 2. पारलौकीक
 3. परलौकीक
 4. पारलौकिक

Question ID : 65497830853
Status : Not Answered
Chosen Option : --

Q.4 दिये गये वाक्यांश के लिए एक शब्द दीजिये।

किए हुए को मानने वाला

- Ans 1. अकृतज्ञ
 2. कृतकार्य
 3. कृतज्ञ
 4. कृतघ्न

Question ID : 65497830862
Status : Not Answered
Chosen Option : --

Q.5 रिक्त स्थान के लिए सबसे उपयुक्त शब्द का चयन करें।

भरत को कैकेयी की करनी पर _____ हुआ।

- Ans 1. क्रोध
 2. पश्चाताप
 3. भय
 4. क्षोभ

Question ID : 65497830866
Status : Not Answered
Chosen Option : --

Q.6 दिए गए वाक्य में रेखांकित खंड को प्रतिस्थापित करने के लिए सबसे उपयुक्त विकल्प का चयन करें। यदि इसे प्रतिस्थापित करने की आवश्यकता नहीं है, तो विकल्प 'किसी बदलाव की आवश्यकता नहीं है' का चयन करें।

भारत में मासिनराम में सर्वाधिक वर्षा होता है।

- Ans 1. सर्वाधिक वर्षा होती है।
 2. सर्वाधिक वर्षा हुए है।
 3. सर्वाधिक वर्षा हुई है।
 4. किसी बदलाव की आवश्यकता नहीं है।

Question ID : 65497830855
Status : Not Answered
Chosen Option : --

Q.7 दिए गए शब्द का विलोम चुनें।

आग्रह

- Ans 1. उपग्रह
 2. अनुग्रह
 3. दुराग्रह
 4. विग्रह

Question ID : 65497830861
Status : Not Answered
Chosen Option : --

Q.8 दिए गए वाक्य का वह भाग ज्ञात करें जिसमें कोई त्रुटि है। यदि कोई त्रुटि नहीं है, तो 'कोई त्रुटि नहीं है' चुनें।

कामायनी पढ़कर (1)/ आनन्द का (2)/ अनुभव होता है (3)/ कोई त्रुटि नहीं है (4)

- Ans 1. 4
 2. 1
 3. 3
 4. 2

Question ID : 65497830860
Status : Not Answered
Chosen Option : --

Q.9 रिक्त स्थान की पूर्ति के लिए सबसे उपयुक्त शब्द का चयन करें।

बच्चा, माँ-बाप की आँखों का _____ होता है।

- Ans 1. सितारा
 2. चाँद
 3. सूरज
 4. तारा

Question ID : 65497830856
Status : Not Answered
Chosen Option : --

Q.10 मुहावरे और उसके अर्थ युक्त सही युग्म की पहचान कीजिए-

- Ans 1. आँखों में धूल झोकना - धोखा देना
 2. अगूठा दिखाना - मुसीबत मोल लेना
 3. अगारे सिर पर धरना - शांति से रहना
 4. अम्बर के तारे गिनना - अच्छी नीद आना

Question ID : 65497830869

Status : Not Answered

Chosen Option : --

Q.11 दिए गए वाक्य का वह भाग ज्ञात करें जिसमें कोई त्रुटि है। यदि कोई त्रुटि नहीं है, तो 'कोई त्रुटि नहीं है' चुनें-

वृक्षों पर कोयल कूक रही है।

- Ans 1. वृक्षों पर
 2. कोई त्रुटि नहीं है।
 3. कोयल कूक
 4. रही है।

Question ID : 65497830858

Status : Not Answered

Chosen Option : --

Q.12 दिए गए वाक्य में रेखांकित खंड को प्रतिस्थापित करने के लिए सबसे उपयुक्त विकल्प का चयन करें। यदि इसे प्रतिस्थापित करने की आवश्यकता नहीं है, तो विकल्प 'किसी बदलाव की आवश्यकता नहीं है' का चयन करें।

मुझसे अब चल नहीं सकता।

- Ans 1. चल नहीं पाता
 2. चला नहीं जाता
 3. चल नहीं गया
 4. किसी बदलाव की आवश्यकता नहीं है।

Question ID : 65497830863

Status : Not Answered

Chosen Option : --

Q.13 दिये गये वाक्य में रेखांकित अश को प्रतिस्थापित करने के लिए सबसे उपयुक्त विकल्प का चयन करें।

तुम मुझे अपना छोटा सा भाई समझो।

- Ans 1. छोटे भाई
 2. छोटा भाई
 3. छोटा-मोटा भाई
 4. छोटे सा भाई

Question ID : 65497830865

Status : Not Answered

Chosen Option : --

Q.14 सही वर्तनी वाले शब्द का चयन कीजिए।

- Ans 1. प्रतीनिधी
 2. प्रतीनीधी
 3. प्रतिनिधि
 4. प्रतिनीधि

Question ID : 65497830854
Status : Not Answered
Chosen Option : --

Q.15 'परिचारक' का पर्यायवाची है-

- Ans 1. धावक
 2. वाहक
 3. चालक
 4. सेवक

Question ID : 65497830872
Status : Not Answered
Chosen Option : --

Q.16 दिये गये वाक्य के किस भाग में त्रुटि है?

उनके शासनकाल में दगे हुए।

- Ans 1. शासनकाल
 2. हुए।
 3. में दगे
 4. उनके

Question ID : 65497830871
Status : Not Answered
Chosen Option : --

Q.17 दिये गये वाक्यांश के लिए एक शब्द दीजिये।

जिसे बुलाया गया हो

- Ans 1. अनाहूत
 2. अनेर
 3. आहूत
 4. अनिमेष

Question ID : 65497830857
Status : Not Answered
Chosen Option : --

Q.18 दिए गए शब्द के समानार्थी शब्द का चयन करें।

उजास

- Ans 1. प्रयास
 2. उन्नति
 3. चमक
 4. उत्तमता

Question ID : 65497830859
Status : Not Answered
Chosen Option : --

Q.19 रिक्त स्थान की पूर्ति के लिए सबसे उपयुक्त विकल्प का चयन करें।

इस मशीन में कुछ _____ है।

- Ans
- 1. खटपट
 - 2. बड़बड़
 - 3. गड़बड़
 - 4. झकझक

Question ID : 65497830867
Status : Not Answered
Chosen Option : --

Q.20 अमावस्या को अधेरा छा जाता है।

रेखांकित शब्द का विलोम बताइए-

- Ans
- 1. अधकार
 - 2. अधेरा
 - 3. पूर्णिमा
 - 4. अमास

Question ID : 65497830868
Status : Not Answered
Chosen Option : --

Comprehension:

दिए गए गद्यांश में से कुछ शब्द हटा दिए गए हैं। सबंधित प्रश्नों में प्रत्येक सख्या के लिए सबसे उपयुक्त विकल्प का चयन कीजिए।

आचार्य महावीरप्रसाद द्विवेदी ने हिन्दी निबन्ध के स्वरूप और (1) _____ का (2) _____ किया। भाषा की (3) _____ पर बल देने के कारण इस (4) _____ के निबन्ध प्रौढ़, व्यवस्थित और गम्भीर हैं। इनमें विषयो की विविधता और विचारों की (5) _____ मिलती है।

SubQuestion No : 21

Q.21 गद्यांश के रिक्त स्थान (1) के लिए सर्वाधिक उपयुक्त शब्द होगा-

- Ans
- 1. दिशा
 - 2. रूप
 - 3. स्वर
 - 4. दशा

Question ID : 65497830874
Status : Not Answered
Chosen Option : --

Comprehension:

दिए गए गद्यांश में से कुछ शब्द हटा दिए गए हैं। सबंधित प्रश्नों में प्रत्येक सख्या के लिए सबसे उपयुक्त विकल्प का चयन कीजिए।

आचार्य महावीरप्रसाद द्विवेदी ने हिन्दी निबन्ध के स्वरूप और (1) _____ का (2) _____ किया। भाषा की (3) _____ पर बल देने के कारण इस (4) _____ के निबन्ध प्रौढ़, व्यवस्थित और गम्भीर हैं। इनमें विषयो की विविधता और विचारों की (5) _____ मिलती है।

SubQuestion No : 22

Q.22 गद्यांश के रिक्त स्थान (2) के लिए सर्वाधिक उपयुक्त शब्द होगा-

- Ans
- 1. सयोजन
 - 2. निर्धारण
 - 3. सस्थापन
 - 4. निश्चितिकरण

Question ID : 65497830875

Status : Not Answered

Chosen Option : --

Comprehension:

दिए गए गद्यांश में से कुछ शब्द हटा दिए गए हैं। सबंधित प्रश्नों में प्रत्येक सख्या के लिए सबसे उपयुक्त विकल्प का चयन कीजिए।

आचार्य महावीरप्रसाद द्विवेदी ने हिन्दी निबन्ध के स्वरूप और (1) _____ का (2) _____ किया। भाषा की (3) _____ पर बल देने के कारण इस (4) _____ के निबन्ध प्रौढ़, व्यवस्थित और गम्भीर हैं। इनमें विषयो की विविधता और विचारों की (5) _____ मिलती है।

SubQuestion No : 23

Q.23 गद्यांश के रिक्त स्थान (3) के लिए सर्वाधिक उपयुक्त शब्द होगा-

- Ans
- 1. शुद्धता
 - 2. सुकुमारता
 - 3. प्रौढ़ता
 - 4. कोमलता

Question ID : 65497830876

Status : Not Answered

Chosen Option : --

Comprehension:

दिए गए गद्यांश में से कुछ शब्द हटा दिए गए हैं। सबंधित प्रश्नों में प्रत्येक सख्या के लिए सबसे उपयुक्त विकल्प का चयन कीजिए।

आचार्य महावीरप्रसाद द्विवेदी ने हिन्दी निबन्ध के स्वरूप और (1) _____ का (2) _____ किया। भाषा की (3) _____ पर बल देने के कारण इस (4) _____ के निबन्ध प्रौढ़, व्यवस्थित और गम्भीर हैं। इनमें विषयो की विविधता और विचारों की (5) _____ मिलती है।

SubQuestion No : 24

Q.24 गद्यांश के रिक्त स्थान (4) के लिए सर्वाधिक उपयुक्त शब्द होगा-

- Ans
- 1. युग
 - 2. समय
 - 3. साल
 - 4. पल

Question ID : 65497830877

Status : Not Answered

Chosen Option : --

Comprehension:

दिए गए गद्यांश में से कुछ शब्द हटा दिए गए हैं। सबंधित प्रश्नों में प्रत्येक सख्या के लिए सबसे उपयुक्त विकल्प का चयन कीजिए।

आचार्य महावीरप्रसाद द्विवेदी ने हिन्दी निबन्ध के स्वरूप और (1) _____ का (2) _____ किया। भाषा की (3) _____ पर बल देने के कारण इस (4) _____ के निबन्ध प्रौढ़, व्यवस्थित और गम्भीर हैं। इनमें विषयो की विविधता और विचारों की (5) _____ मिलती है।

SubQuestion No : 25

Q.25 गद्यांश के रिक्त स्थान (5) के लिए सर्वाधिक उपयुक्त शब्द होगा-

- Ans** 1. गहराई
 2. गहनता
 3. महानता
 4. भिन्नता

Question ID : **65497830878**

Status : **Not Answered**

Chosen Option : --