

National Testing Agency

Question Paper Name :	03 23062023
Subject Name :	23JunShift3 Subject Combination International
Creation Date :	2023-06-23 21:30:32
Duration :	240
Total Marks :	1050
Display Marks:	Yes

English

Group Number :	1
Group Id :	540250334
Group Maximum Duration :	45
Group Minimum Duration :	45
Show Attended Group? :	No
Edit Attended Group? :	No
Break time :	0
Group Marks :	200
Is this Group for Examiner? :	No
Examiner permission :	Cant View
Show Progress Bar? :	No

English

Section Id :	540250404
Section Number :	1

Section type : Online
Mandatory or Optional : Mandatory
Number of Questions : 50
Number of Questions to be attempted : 40
Section Marks : 200
Enable Mark as Answered Mark for Review and Clear Response : Yes
Maximum Instruction Time : 0
Sub-Section Number : 1
Sub-Section Id : 5402501134
Question Shuffling Allowed : No
Is Section Default? : null

Question Number : 1 Question Id : 54025016071 Question Type : MCQ Option Shuffling : No Is Question Mandatory : No Calculator : None Response Time : N.A Think Time : N.A Minimum Instruction Time : 0

Correct Marks : 5 Wrong Marks : 1

Question Key Details :

Key	Value
Comprehension	Comp1

Read the following passage Answer the Questions :

The ridge at this point about fifty yards wide, and as the hut was on the south edge of the ridge, and the village on the north face of the hill, the latter was not visible from the former. I had been sitting on the rock for ten minutes when a head appeared over the crest from the direction of the village, followed by a second and a third. My friend the water-carrier had not been slow in informing the village of my arrival.

When strangers meet in India and wish to glean information from each other on any particular subject, it is customary to refrain from broaching the subject that has brought them together - whether accidentally or of set purpose - until the very last moment and to fill up the interval by finding out everything concerning each other's domestic and private affairs; as, for instance, whether married and if so the number and sex of children and their ages; if not married, why not; occupation and amount of pay, and so on. Questions that would in any other part of the world earn one a thick ear, are in India - and especially in our hills - asked so artlessly and universally that no one who has lived among the people, dreams of taking offence at them.

Where was the narrator sitting when he saw someone coming ?

- (1) the rock
- (2) the crest
- (3) the ridge
- (4) the hill

Options :

54025064281. 1

54025064282. 2

54025064283. 3

54025064284. 4

Question Number : 2 Question Id : 54025016072 Question Type : MCQ Option Shuffling : No Is

Question Mandatory : No Calculator : None Response Time : N.A Think Time : N.A Minimum

Instruction Time : 0

Correct Marks : 5 Wrong Marks : 1

Question Key Details :

Key	Value
Comprehension	Comp1

Read the following passage Answer the Questions :

The ridge at this point about fifty yards wide, and as the hut was on the south edge of the ridge, and the village on the north face of the hill, the latter was not visible from the former. I had been sitting on the rock for ten minutes when a head appeared over the crest from the direction of the village, followed by a second and a third. My friend the water-carrier had not been slow in informing the village of my arrival.

When strangers meet in India and wish to glean information from each other on any particular subject, it is customary to refrain from broaching the subject that has brought them together - whether accidentally or of set purpose - until the very last moment and to fill up the interval by finding out everything concerning each other's domestic and private affairs; as, for instance, whether married and if so the number and sex of children and their ages; if not married, why not; occupation and amount of pay, and so on. Questions that would in any other part of the world earn one a thick ear, are in India - and especially in our hills - asked so artlessly and universally that no one who has lived among the people, dreams of taking offence at them.

In the context of the passage what does it mean to 'earn a thick ear' ?

- (1) act against your interest
- (2) catch a disease
- (3) make a big mistake
- (4) get punished

Options :

54025064285. 1

54025064286. 2

54025064287. 3

54025064288. 4

Question Number : 3 Question Id : 54025016073 Question Type : MCQ Option Shuffling : No Is

Question Mandatory : No Calculator : None Response Time : N.A Think Time : N.A Minimum

Instruction Time : 0

Correct Marks : 5 Wrong Marks : 1

Question Key Details :

Key	Value
Comprehension	Comp1

Read the following passage Answer the Questions :

The ridge at this point about fifty yards wide, and as the hut was on the south edge of the ridge, and the village on the north face of the hill, the latter was not visible from the former. I had been sitting on the rock for ten minutes when a head appeared over the crest from the direction of the village, followed by a second and a third. My friend the water-carrier had not been slow in informing the village of my arrival.

When strangers meet in India and wish to glean information from each other on any particular subject, it is customary to refrain from broaching the subject that has brought them together - whether accidentally or of set purpose - until the very last moment and to fill up the interval by finding out everything concerning each other's domestic and private affairs; as, for instance, whether married and if so the number and sex of children and their ages; if not married, why not; occupation and amount of pay, and so on. Questions that would in any other part of the world earn one a thick ear, are in India - and especially in our hills - asked so artlessly and universally that no one who has lived among the people, dreams of taking offence at them.

Who were likely to be offended by their artless questions ?

- (1) Villagers
- (2) Water carrier
- (3) People from the hills
- (4) None of the above

Options :

54025064289. 1

54025064290. 2

54025064291. 3

54025064292. 4

Question Number : 4 Question Id : 54025016074 Question Type : MCQ Option Shuffling : No Is

Question Mandatory : No Calculator : None Response Time : N.A Think Time : N.A Minimum

Instruction Time : 0

Correct Marks : 5 Wrong Marks : 1

Question Key Details :

Key	Value
Comprehension	Comp1

Read the following passage Answer the Questions :

The ridge at this point about fifty yards wide, and as the hut was on the south edge of the ridge, and the village on the north face of the hill, the latter was not visible from the former. I had been sitting on the rock for ten minutes when a head appeared over the crest from the direction of the village, followed by a second and a third. My friend the water-carrier had not been slow in informing the village of my arrival.

When strangers meet in India and wish to glean information from each other on any particular subject, it is customary to refrain from broaching the subject that has brought them together - whether accidentally or of set purpose - until the very last moment and to fill up the interval by finding out everything concerning each other's domestic and private affairs; as, for instance, whether married and if so the number and sex of children and their ages; if not married, why not; occupation and amount of pay, and so on. Questions that would in any other part of the world earn one a thick ear, are in India - and especially in our hills - asked so artlessly and universally that no one who has lived among the people, dreams of taking offence at them.

Choose the factually correct sentences from the following :

- (A) The village was visible from the hut.
- (B) The hut was on the south edge of the ridge
- (C) The water carrier came from the direction of the village
- (D) The villagers came with urgent news
- (E) The villagers asked the narrator many questions

Choose the **correct** answer from the options given below :

- (1) (A), (C), (D) Only
- (2) (B) and (E) Only
- (3) (A), (B) and (E) Only
- (4) (C) and (D) Only

Options :

54025064293. 1

54025064294. 2

54025064295. 3

54025064296. 4

Question Number : 5 Question Id : 54025016075 Question Type : MCQ Option Shuffling : No Is

Question Mandatory : No Calculator : None Response Time : N.A Think

Instruction Time : 0

Correct Marks : 5 Wrong Marks : 1

Question Key Details :

Key	Value
Comprehension	Comp1

Read the following passage Answer the Questions :

The ridge at this point about fifty yards wide, and as the hut was on the south edge of the ridge, and the village on the north face of the hill, the latter was not visible from the former. I had been sitting on the rock for ten minutes when a head appeared over the crest from the direction of the village, followed by a second and a third. My friend the water-carrier had not been slow in informing the village of my arrival.

When strangers meet in India and wish to glean information from each other on any particular subject, it is customary to refrain from broaching the subject that has brought them together - whether accidentally or of set purpose - until the very last moment and to fill up the interval by finding out everything concerning each other's domestic and private affairs; as, for instance, whether married and if so the number and sex of children and their ages; if not married, why not; occupation and amount of pay, and so on. Questions that would in any other part of the world earn one a thick ear, are in India - and especially in our hills - asked so artlessly and universally that no one who has lived among the people, dreams of taking offence at them.

Match List - I with List - II.

List - I

List - II

- | | |
|---------------|--------------|
| (A) customary | (I) raise |
| (B) glean | (II) usual |
| (C) broach | (III) gather |
| (D) refrain | (IV) stop |

Choose the **correct** answer from the options given below :

- (1) (A)-(IV), (B)-(I), (C)-(III), (D)-(II)
- (2) (A)-(III), (B)-(II), (C)-(IV), (D)-(I)
- (3) (A)-(II), (B)-(III), (C)-(I), (D)-(IV)
- (4) (A)-(I), (B)-(IV), (C)-(II), (D)-(III)

Options :

54025064297. 1

54025064298. 2

54025064299. 3

54025064300.4

Sub-Section Number : 2
Sub-Section Id : 5402501135
Question Shuffling Allowed : No
Is Section Default? : null

Question Number : 6 Question Id : 54025016076 Question Type : MCQ Option Shuffling : No Is Question Mandatory : No Calculator : None Response Time : N.A Think Time : N.A Minimum Instruction Time : 0

Correct Marks : 5 Wrong Marks : 1

Question Key Details :

Key	Value
Comprehension	Comp2

Read the following passage answer the Questions :

In 1984, the French and the British agreed that a link across the English Channel would be mutually beneficial. However, both the Governments realised that although the project would create the much needed jobs, neither country's Government could fund such a massive project. Thus, they decided to hold a contest.

This contest invited companies to submit their plan to create a link across the English Channel. As part of the contest's requirements, the submitting company was to provide a plan to raise the needed funds to build the project, have the ability to operate the proposed Channel link once the project was completed, and the proposed link must be able to endure for at least 120 years.

Ten proposals were submitted, including various tunnels and bridges. Some of the proposals were so outlandish in design that they were easily dismissed; others would be so expensive that they were unlikely to ever be completed. The successful proposal planned for a tunnel made up of two, parallel railway tunnels that would be dug under the English Channel. Between these two railway tunnels would run a third, smaller tunnel that would be used for maintenance, including drainage pipes, communication cables etc.

After the first testrun on 10 December 1993, the Channel Tunnel officially opened on 6 may 1994.

What did the context involving the competing companies require ? Choose the **incorrect** option.

- (1) The companies were supposed to provide a plan to raise the needed funds to build the project.
- (2) The companies were expected to operate the proposed channel link once the project was completed.
- (3) The link across the English Channel was supposed to be outlandish. The companies were asked to keep that in mind.
- (4) The link must be able to endure for at least 120 years.

Options :

54025064301. 1

54025064302. 2

54025064303. 3

54025064304. 4

Question Number : 7 Question Id : 54025016077 Question Type : MCQ Option Shuffling : No Is

Question Mandatory : No Calculator : None Response Time : N.A Think Time : N.A Minimum

Instruction Time : 0

Correct Marks : 5 Wrong Marks : 1

Question Key Details :

Key	Value
Comprehension	Comp2

Read the following passage answer the Questions :

In 1984, the French and the British agreed that a link across the English Channel would be mutually beneficial. However, both the Governments realised that although the project would create the much needed jobs, neither country's Government could fund such a massive project. Thus, they decided to hold a contest.

This contest invited companies to submit their plan to create a link across the English Channel. As part of the contest's requirements, the submitting company was to provide a plan to raise the needed funds to build the project, have the ability to operate the proposed Channel link once the project was completed, and the proposed link must be able to endure for at least 120 years.

Ten proposals were submitted, including various tunnels and bridges. Some of the proposals were so outlandish in design that they were easily dismissed; others would be so expensive that they were unlikely to ever be completed. The successful proposal planned for a tunnel made up of two, parallel railway tunnels that would be dug under the English Channel. Between these two railway tunnels would run a third, smaller tunnel that would be used for maintenance, including drainage pipes, communication cables etc.

After the first testrun on 10 December 1993, the Channel Tunnel officially opened on 6 may 1994. Arrange the following sentences in their order of occurrence in the passage.

- (A) The successful proposal planned for a tunnel made up of two, parallel railway tunnels that would be dug.
- (B) The proposed link must be able to endure for atleast 120 years.
- (C) They decided to hold a contest
- (D) A third smaller tunnel would be used for maintenance.
- (E) Both the Governments realized that although the project would create the much needed jobs, neither could fund it.

Choose the **correct** answer from the options given below :

- (1) (A), (B), (D), (C), (E)
- (2) (E), (B), (C), (D), (A)
- (3) (E), (C), (B), (A), (D)
- (4) (C), (A), (B), (E), (D)

Options :

54025064305. 1

54025064306. 2

54025064307. 3

Question Number : 8 Question Id : 54025016078 Question Type : MCQ Option Shuffling : No Is Question Mandatory : No Calculator : None Response Time : N.A Think Time : N.A Minimum Instruction Time : 0

Correct Marks : 5 Wrong Marks : 1

Question Key Details :

Key	Value
Comprehension	Comp2

Read the following passage answer the Questions :

In 1984, the French and the British agreed that a link across the English Channel would be mutually beneficial. However, both the Governments realised that although the project would create the much needed jobs, neither country's Government could fund such a massive project. Thus, they decided to hold a contest.

This contest invited companies to submit their plan to create a link across the English Channel. As part of the contest's requirements, the submitting company was to provide a plan to raise the needed funds to build the project, have the ability to operate the proposed Channel link once the project was completed, and the proposed link must be able to endure for at least 120 years.

Ten proposals were submitted, including various tunnels and bridges. Some of the proposals were so outlandish in design that they were easily dismissed; others would be so expensive that they were unlikely to ever be completed. The successful proposal planned for a tunnel made up of two, parallel railway tunnels that would be dug under the English Channel. Between these two railway tunnels would run a third, smaller tunnel that would be used for maintenance, including drainage pipes, communication cables etc.

After the first testrun on 10 December 1993, the Channel Tunnel officially opened on 6 may 1994.

What would be the appropriate meaning of the word "shuttle" ?

- (1) a form of transport that travels regularly between two places.
- (2) a submarine based vehicle to more goods.
- (3) a type of tram.
- (4) a concered motor vehicle that sporadically travels to end from the station.

Options :

54025064309. 1

54025064310. 2

54025064311. 3

Question Number : 9 Question Id : 54025016079 Question Type : MCQ Option Shuffling : No Is Question Mandatory : No Calculator : None Response Time : N.A Think Time : N.A Minimum Instruction Time : 0

Correct Marks : 5 Wrong Marks : 1

Question Key Details :

Key	Value
Comprehension	Comp2

Read the following passage answer the Questions :

In 1984, the French and the British agreed that a link across the English Channel would be mutually beneficial. However, both the Governments realised that although the project would create the much needed jobs, neither country's Government could fund such a massive project. Thus, they decided to hold a contest.

This contest invited companies to submit their plan to create a link across the English Channel. As part of the contest's requirements, the submitting company was to provide a plan to raise the needed funds to build the project, have the ability to operate the proposed Channel link once the project was completed, and the proposed link must be able to endure for at least 120 years.

Ten proposals were submitted, including various tunnels and bridges. Some of the proposals were so outlandish in design that they were easily dismissed; others would be so expensive that they were unlikely to ever be completed. The successful proposal planned for a tunnel made up of two, parallel railway tunnels that would be dug under the English Channel. Between these two railway tunnels would run a third, smaller tunnel that would be used for maintenance, including drainage pipes, communication cables etc.

After the first testrun on 10 December 1993, the Channel Tunnel officially opened on 6 may 1994. When was the first test run completed through the Channel Tunnel ?

- (1) 6 May, 1994
- (2) 10 December, 1993
- (3) 6 August, 1993
- (4) 11 December, 1994

Options :

54025064313. 1

54025064314. 2

54025064315. 3

Question Number : 10 Question Id : 54025016080 Question Type : MCQ Option Shuffling : No

Is Question Mandatory : No Calculator : None Response Time : N.A Think Time : N.A

Minimum Instruction Time : 0

Correct Marks : 5 Wrong Marks : 1

Question Key Details :

Key	Value
Comprehension	Comp2

Read the following passage answer the Questions :

In 1984, the French and the British agreed that a link across the English Channel would be mutually beneficial. However, both the Governments realised that although the project would create the much needed jobs, neither country's Government could fund such a massive project. Thus, they decided to hold a contest.

This contest invited companies to submit their plan to create a link across the English Channel. As part of the contest's requirements, the submitting company was to provide a plan to raise the needed funds to build the project, have the ability to operate the proposed Channel link once the project was completed, and the proposed link must be able to endure for at least 120 years.

Ten proposals were submitted, including various tunnels and bridges. Some of the proposals were so outlandish in design that they were easily dismissed; others would be so expensive that they were unlikely to ever be completed. The successful proposal planned for a tunnel made up of two, parallel railway tunnels that would be dug under the English Channel. Between these two railway tunnels would run a third, smaller tunnel that would be used for maintenance, including drainage pipes, communication cables etc.

After the first testrun on 10 December 1993, the Channel Tunnel officially opened on 6 may 1994.

Which of the following statement is **incorrect** with respect to the given passage ?

- (1) The smaller tunnel was to be used to provide a passage for aquatic animals.
- (2) Shuttles would be able to hold cars and trucks.
- (3) Some trains would carry passengers only.
- (4) Most of the proposal to build the link were rejected.

Options :

54025064317. 1

54025064318. 2

54025064319. 3

54025064320.4

Sub-Section Number : 3
Sub-Section Id : 5402501136
Question Shuffling Allowed : No
Is Section Default? : null

Question Number : 11 Question Id : 54025016081 Question Type : MCQ Option Shuffling : No

Is Question Mandatory : No Calculator : None Response Time : N.A Think Time : N.A

Minimum Instruction Time : 0

Correct Marks : 5 Wrong Marks : 1

Question Key Details :

Key	Value
Comprehension	Comp3

Read the following passage. Answer questions :

When I was a small child my grandparents would take me blackberry picking. It was usually late August when the blackberries had fully ripened. Grandad would drive us in his old van. Despite not being comfortable or particularly safe, Grandad's van had a character you would not find in sleek new car complete with the latest innovations and a silent engine. Being seven or eight at the time, I always enjoyed a trip as we bounced along to our destination.

My grandparents always chose the same spot. Wild blackberry bushes stretched along the roadside as far as the eye could see in the both directions. The road overlooked a small pitch and putt course. On such sunny summer days it was always full. Golfers ambled sedately from hole and the crack of metal striking ball was a constant accompaniment.

Several hours of picking berries ensured. Nana warned me not to eat any until they had all been washed but turned a knowing blind eye while I gorged anyway. I also helped myself to the occasional unripe red berry as I had a particular taste for anything bitter. The fully immature green berries proved a step too far for even my pallet and were merely unpleasant.

When at last we were finished the bright scenery had turned to lengthy shadows and the afternoon had elapsed into evening. Grandad hauled a bin bag half full of berries back to the van. Juice bled slowly onto the ground. Nana would later make apple and blackberry tarts and fill several jars with jam. When I reached the van my stomach hurt from too much fruit. My hands stung from constant thorn pricks and were strained dark purple. I always enjoyed those days.

Arrange the sentences in its order of occurrence :

- (A) Nana warned me not to eat any until they had all been washed but turned a knowing blind eye while I gorged anyway.
- (B) I always enjoyed a trip as we bounced along to our destination.
- (C) The road overlooked a small pitch and putt course.
- (D) Nana would later make apple and blackberry tarts.
- (E) Grandad's van had a character you would not find in a sleek new car.

Choose the **correct** answer from the options given below :

- (1) (B), (E), (A), (C), (D)
- (2) (C), (B), (E), (A), (D)
- (3) (E), (B), (C), (A), (D)
- (4) (D), (A), (E), (B), (C)

Options :

54025064321. 1

54025064322. 2

54025064323. 3

54025064324. 4

Question Number : 12 Question Id : 54025016082 Question Type : MCQ Option Shuffling : No

Is Question Mandatory : No Calculator : None Response Time : N.A Think Time : N.A

Minimum Instruction Time : 0

Correct Marks : 5 Wrong Marks : 1

Question Key Details :

Key	Value
Comprehension	Comp3

Read the following passage. Answer questions :

When I was a small child my grandparents would take me blackberry picking. It was usually late August when the blackberries had fully ripened. Grandad would drive us in his old van. Despite not being comfortable or particularly safe, Grandad's van had a character you would not find in sleek new car complete with the latest innovations and a silent engine. Being seven or eight at the time, I always enjoyed a trip as we bounced along to our destination.

My grandparents always chose the same spot. Wild blackberry bushes stretched along the roadside as far as the eye could see in the both directions. The road overlooked a small pitch and putt course. On such sunny summer days it was always full. Golfers ambled sedately from hole and the crack of metal striking ball was a constant accompaniment.

Several hours of picking berries ensured. Nana warned me not to eat any until they had all been washed but turned a knowing blind eye while I gorged anyway. I also helped myself to the occasional unripe red berry as I had a particular taste for anything bitter. The fully immature green berries proved a step too far for even my pallet and were merely unpleasant.

When at last we were finished the bright scenery had turned to lengthy shadows and the afternoon had elapsed into evening. Grandad hauled a bin bag half full of berries back to the van. Juice bled slowly onto the ground. Nana would later make apple and blackberry tarts and fill several jars with jam. When I reached the van my stomach hurt from too much fruit. My hands stung from constant thorn pricks and were strained dark purple. I always enjoyed those days.

What would be the apt synonym for 'ambled' ?

- (1) dispute or bargain persistently
- (2) to walk at a more leisurely pace
- (3) surround or enclose
- (4) express one's opinion in a pompous and dogmatic way

Options :

54025064325. 1

54025064326. 2

54025064327. 3

54025064328. 4

Question Number : 13 Question Id : 54025016083 Question Type : MCQ Option Shuffling : No

Is Question Mandatory : No Calculator : None Response Time : N.A Think Time : N.A

Minimum Instruction Time : 0

Correct Marks : 5 Wrong Marks : 1

Question Key Details :

Key	Value
Comprehension	Comp3

Read the following passage. Answer questions :

When I was a small child my grandparents would take me blackberry picking. It was usually late August when the blackberries had fully ripened. Grandad would drive us in his old van. Despite not being comfortable or particularly safe, Grandad's van had a character you would not find in sleek new car complete with the latest innovations and a silent engine. Being seven or eight at the time, I always enjoyed a trip as we bounced along to our destination.

My grandparents always chose the same spot. Wild blackberry bushes stretched along the roadside as far as the eye could see in the both directions. The road overlooked a small pitch and putt course. On such sunny summer days it was always full. Golfers ambled sedately from hole and the crack of metal striking ball was a constant accompaniment.

Several hours of picking berries ensured. Nana warned me not to eat any until they had all been washed but turned a knowing blind eye while I gorged anyway. I also helped myself to the occasional unripe red berry as I had a particular taste for anything bitter. The fully immature green berries proved a step too far for even my pallet and were merely unpleasant.

When at last we were finished the bright scenery had turned to lengthy shadows and the afternoon had elapsed into evening. Grandad hauled a bin bag half full of berries back to the van. Juice bled slowly onto the ground. Nana would later make apple and blackberry tarts and fill several jars with jam. When I reached the van my stomach hurt from too much fruit. My hands stung from constant thorn pricks and were strained dark purple. I always enjoyed those days.

From the following list of events and activities in the passage, choose the incorrect one :

- (1) They would pick blueberries for several hours.
- (2) The juice from the blueberries would bleed onto the ground.
- (3) It was usually late August when the blueberries fully ripened.
- (4) Grandma would drive the narrator in her old van.

Options :

54025064329. 1

54025064330. 2

54025064331. 3

54025064332. 4

Question Number : 14 Question Id : 54025016084 Question Type : MCQ Option Shuffling : No

Is Question Mandatory : No Calculator : None Response Time : N.A Think Time : N.A

Minimum Instruction Time : 0

Correct Marks : 5 Wrong Marks : 1

Question Key Details :

Key	Value
Comprehension	Comp3

Read the following passage. Answer questions :

When I was a small child my grandparents would take me blackberry picking. It was usually late August when the blackberries had fully ripened. Grandad would drive us in his old van. Despite not being comfortable or particularly safe, Grandad's van had a character you would not find in sleek new car complete with the latest innovations and a silent engine. Being seven or eight at the time, I always enjoyed a trip as we bounced along to our destination.

My grandparents always chose the same spot. Wild blackberry bushes stretched along the roadside as far as the eye could see in the both directions. The road overlooked a small pitch and putt course. On such sunny summer days it was always full. Golfers ambled sedately from hole and the crack of metal striking ball was a constant accompaniment.

Several hours of picking berries ensured. Nana warned me not to eat any until they had all been washed but turned a knowing blind eye while I gorged anyway. I also helped myself to the occasional unripe red berry as I had a particular taste for anything bitter. The fully immature green berries proved a step too far for even my pallet and were merely unpleasant.

When at last we were finished the bright scenery had turned to lengthy shadows and the afternoon had elapsed into evening. Grandad hauled a bin bag half full of berries back to the van. Juice bled slowly onto the ground. Nana would later make apple and blackberry tarts and fill several jars with jam. When I reached the van my stomach hurt from too much fruit. My hands stung from constant thorn pricks and were strained dark purple. I always enjoyed those days.

What would happen to the narrator's hands at the end of the day ?

- (1) It would amble sedately.
- (2) It was swollen and stained purplish red.
- (3) It stung from constant thorn pricks.
- (4) It was broken as he fell from a blueberry tree.

Options :

54025064333. 1

54025064334. 2

54025064335. 3

54025064336. 4

Question Number : 15 Question Id : 54025016085 Question Type : MCQ Option Shuffling : No

Is Question Mandatory : No Calculator : None Response Time : N.A Think Time : N.A

Minimum Instruction Time : 0

Correct Marks : 5 Wrong Marks : 1

Question Key Details :

Key	Value
Comprehension	Comp3

Read the following passage. Answer questions :

When I was a small child my grandparents would take me blackberry picking. It was usually late August when the blackberries had fully ripened. Grandad would drive us in his old van. Despite not being comfortable or particularly safe, Grandad's van had a character you would not find in sleek new car complete with the latest innovations and a silent engine. Being seven or eight at the time, I always enjoyed a trip as we bounced along to our destination.

My grandparents always chose the same spot. Wild blackberry bushes stretched along the roadside as far as the eye could see in the both directions. The road overlooked a small pitch and putt course. On such sunny summer days it was always full. Golfers ambled sedately from hole and the crack of metal striking ball was a constant accompaniment.

Several hours of picking berries ensured. Nana warned me not to eat any until they had all been washed but turned a knowing blind eye while I gorged anyway. I also helped myself to the occasional unripe red berry as I had a particular taste for anything bitter. The fully immature green berries proved a step too far for even my pallet and were merely unpleasant.

When at last we were finished the bright scenery had turned to lengthy shadows and the afternoon had elapsed into evening. Grandad hauled a bin bag half full of berries back to the van. Juice bled slowly onto the ground. Nana would later make apple and blackberry tarts and fill several jars with jam. When I reached the van my stomach hurt from too much fruit. My hands stung from constant thorn pricks and were strained dark purple. I always enjoyed those days.

How would you describe the given passage ?

- (1) The narrator is nostalgic and missed his deceased grandparents.
- (2) The narrator has fond memories of picking blueberries with his grandparents.
- (3) The narrator hurt his hand and was fatally injured during his trip with his grandparents.
- (4) The narrator reveals details about his grandparents blueberries jam business.

Options :

54025064337. 1

54025064338. 2

54025064339. 3

54025064340. 4

Sub-Section Number :

4

Sub-Section Id :

5402501137

Question Shuffling Allowed :

Yes

Is Section Default? :

null

Question Number : 16 Question Id : 54025016086 Question Type : MCQ Option Shuffling : No

Is Question Mandatory : No Calculator : None Response Time : N.A Think Time : N.A

Minimum Instruction Time : 0

Correct Marks : 5 Wrong Marks : 1

Question Key Details :

Key	Value
Comprehension	MCQ

Read the following passage. Answer questions :

When I was a small child my grandparents would take me blackberry picking. It was usually late August when the blackberries had fully ripened. Grandad would drive us in his old van. Despite not being comfortable or particularly safe, Grandad's van had a character you would not find in sleek new car complete with the latest innovations and a silent engine. Being seven or eight at the time, I always enjoyed a trip as we bounced along to our destination.

My grandparents always chose the same spot. Wild blackberry bushes stretched along the roadside as far as the eye could see in the both directions. The road overlooked a small pitch and putt course. On such sunny summer days it was always full. Golfers ambled sedately from hole and the crack of metal striking ball was a constant accompaniment.

Several hours of picking berries ensured. Nana warned me not to eat any until they had all been washed but turned a knowing blind eye while I gorged anyway. I also helped myself to the occasional unripe red berry as I had a particular taste for anything bitter. The fully immature green berries proved a step too far for even my pallet and were merely unpleasant.

When at last we were finished the bright scenery had turned to lengthy shadows and the afternoon had elapsed into evening. Grandad hauled a bin bag half full of berries back to the van. Juice bled slowly onto the ground. Nana would later make apple and blackberry tarts and fill several jars with jam. When I reached the van my stomach hurt from too much fruit. My hands stung from constant thorn pricks and were strained dark purple. I always enjoyed those days.

Change the following sentences into active voice and choose the correct option :

The shipment will be sent by Friday.

- (1) By Friday the shipment will be sent by us.
- (2) We will send the shipment by Friday.
- (3) We will have sent the shipment by Friday.
- (4) By Friday the shipment will have been sent.

Options :

54025064341. 1

54025064342. 2

54025064343. 3

54025064344. 4

Question Number : 17 Question Id : 54025016087 Question Type : MCQ Option Shuffling : No

Is Question Mandatory : No Calculator : None Response Time : N.A Think Time : N.A

Minimum Instruction Time : 0

Correct Marks : 5 Wrong Marks : 1

Question Key Details :

Key	Value
Comprehension	MCQ

Identify the sentence written in passive voice :

- (1) someone stole my watch
- (2) we expected him to call
- (3) you are requested to complete the project
- (4) you must deliver this passage

Options :

54025064345. 1

54025064346. 2

54025064347. 3

54025064348. 4

Question Number : 18 Question Id : 54025016088 Question Type : MCQ Option Shuffling : No

Is Question Mandatory : No Calculator : None Response Time : N.A Think Time : N.A

Minimum Instruction Time : 0

Correct Marks : 5 Wrong Marks : 1

Question Key Details :

Key	Value
Comprehension	MCQ

Choose the **correct** form of reported verb when the following sentence is changed to indirect speech :

She says, "I enjoy walking".

- (1) I enjoy
- (2) I enjoyed
- (3) She enjoys
- (4) She enjoyed

Options :

54025064349. 1

54025064350. 2

54025064351. 3

54025064352. 4

Question Number : 19 Question Id : 54025016089 Question Type : MCQ Option Shuffling : No

Is Question Mandatory : No Calculator : None Response Time : N.A Think Time : N.A

Minimum Instruction Time : 0

Correct Marks : 5 Wrong Marks : 1

Question Key Details :

Key	Value
Comprehension	MCQ

Choose the **correct** form of reported speech from the options given below :

Rakesh said, "Shall I play the movie?"

- (1) Rakesh said if he could play the movie ?
- (2) Rakesh asked that he should play the movie.
- (3) Rakesh said if he should play the movie.
- (4) Rakesh asked if he should play the movie.

Options :

54025064353. 1

54025064354. 2

54025064355. 3

54025064356. 4

Question Number : 20 Question Id : 54025016090 Question Type : MCQ Option Shuffling : No

Is Question Mandatory : No Calculator : None Response Time : N.A Think Time : N.A

Minimum Instruction Time : 0

Correct Marks : 5 Wrong Marks : 1

Question Key Details :

Key	Value
Comprehension	MCQ

Re arrange the jumbled sentences into a paragraph.

- (A) With the advent of new technology, the film makers had the possibility of synchronising the sound track with action.
- (B) The movies were called talkies since the audience was able to hear the actors talk with each other.
- (C) This included Dialogues, Music and Special effects.
- (D) Films used to be silent with just action on the screen along with subtitles.
- (E) However colour movies were somewhat slow due to the processing cost.

Choose the **correct** answer from the options given below :

- (1) (A), (B), (C), (D), (E)
- (2) (D), (A), (C), (B), (E)
- (3) (C), (B), (D), (A), (B)
- (4) (B), (A),(D), (E), (C)

Options :

54025064357. 1

54025064358. 2

54025064359. 3

54025064360. 4

Question Number : 21 Question Id : 54025016091 Question Type : MCQ Option Shuffling : No

Is Question Mandatory : No Calculator : None Response Time : N.A Think Time : N.A

Minimum Instruction Time : 0

Correct Marks : 5 Wrong Marks : 1

Question Key Details :

Key	Value
Comprehension	MCQ

Rearrange the jumbled sentences into a paragraph.

- (A) Thousands of people lost their homes, lives and were displaced.
- (B) Chennai was flooded after incessant rains in November 2022 following the worst rainfall in 100 years.
- (C) The Indian Army, Navy and Air Force worked shoulder to shoulder with many NGOs.
- (D) Hectic rescue efforts were on, round the clock.
- (E) Many areas were completely submerged in water causing massive damage to life and supply.

Choose the **correct** answer from the options given below :

- (1) (A), (B), (C), (D), (E)
- (2) (E), (D), (C), (B), (A)
- (3) (B), (E), (A), (D), (C)
- (4) (E), (B), (D), (A), (C)

Options :

54025064361. 1

54025064362. 2

54025064363. 3

54025064364. 4

Question Number : 22 Question Id : 54025016092 Question Type : MCQ Option Shuffling : No

Is Question Mandatory : No Calculator : None Response Time : N.A Think Time : N.A

Minimum Instruction Time : 0

Correct Marks : 5 Wrong Marks : 1

Question Key Details :

Key	Value
Comprehension	MCQ

Match List - I with List - II. Foreign words and its meaning.

List - I

List - II

- | | |
|----------------|--------------------------------|
| (A) alias | (I) Pleasant Journey to You |
| (B) Bon Voyage | (II) First Appearance in Event |
| (C) debut | (III) not open to Public |
| (D) in camera | (IV) nick name |

Choose the **correct** answer from the options given below :

- (1) (A)-(I), (B)-(II), (C)-(III), (D)-(IV)
- (2) (A)-(II), (B)-(III), (C)-(IV), (D)-(I)
- (3) (A)-(IV), (B)-(I), (C)-(II), (D)-(III)
- (4) (A)-(III), (B)-(IV), (C)-(I), (D)-(II)

Options :

54025064365. 1

54025064366. 2

54025064367. 3

54025064368. 4

Question Number : 23 Question Id : 54025016093 Question Type : MCQ Option Shuffling : No

Is Question Mandatory : No Calculator : None Response Time : N.A Think Time : N.A

Minimum Instruction Time : 0

Correct Marks : 5 Wrong Marks : 1

Question Key Details :

Key	Value
Comprehension	MCQ

Replace the underlined words by a foreign expression. The Lok Sabha Speaker adjourned the Parliament Session for an indefinite peroid :

- (1) Sine cure
- (2) Sine qua non
- (3) Sin bin
- (4) Sine die

Options :

54025064369. 1

54025064370. 2

54025064371. 3

54025064372. 4

Question Number : 24 Question Id : 54025016094 Question Type : MCQ Option Shuffling : No

Is Question Mandatory : No Calculator : None Response Time : N.A Think Time : N.A

Minimum Instruction Time : 0

Correct Marks : 5 Wrong Marks : 1

Question Key Details :

Key	Value
Comprehension	MCQ

Find the synonym for the underlined words.

These local competitors have been eliminated. Walmart is free to raise the prices again, since it has established itself as a local Monopoly :

- (1) Two sellers
- (2) Single seller
- (3) Single person
- (4) Two persons

Options :

54025064373. 1

54025064374. 2

54025064375. 3

54025064376. 4

Question Number : 25 Question Id : 54025016095 Question Type : MCQ Option Shuffling : No

Is Question Mandatory : No Calculator : None Response Time : N.A Think Time : N.A

Minimum Instruction Time : 0

Correct Marks : 5 Wrong Marks : 1

Question Key Details :

Key	Value
Comprehension	MCQ

Match List - I with List - II Synonyms.

List - I	List - II
(A) Alien	(I) opponent
(B) Fragile	(II) stranger
(C) Foe	(III) dismantle
(D) Demolish	(IV) weak

Choose the **correct** answer from the options given below :

- (1) (A)-(I), (B)-(III), (C)-(II), (D)-(IV)
- (2) (A)-(III), (B)-(II), (C)-(IV), (D)-(I)
- (3) (A)-(II), (B)-(IV), (C)-(I), (D)-(III)
- (4) (A)-(IV), (B)-(I), (C)-(III), (D)-(II)

Options :

54025064377. 1

54025064378. 2

54025064379. 3

54025064380. 4

Question Number : 26 Question Id : 54025016096 Question Type : MCQ Option Shuffling : No

Is Question Mandatory : No Calculator : None Response Time : N.A Think Time : N.A

Minimum Instruction Time : 0

Correct Marks : 5 Wrong Marks : 1

Question Key Details :

Key	Value
Comprehension	MCQ

Fill in the blanks with suitable Articles.

Let us enter the world of _____ bold and _____ beautiful.

Choose the appropriate option :

- (1) a, a
- (2) the, The
- (3) the, a
- (4) a the

Options :

54025064381. 1

54025064382. 2

54025064383. 3

54025064384. 4

Question Number : 27 Question Id : 54025016097 Question Type : MCQ Option Shuffling : No

Is Question Mandatory : No Calculator : None Response Time : N.A Think Time : N.A

Minimum Instruction Time : 0

Correct Marks : 5 Wrong Marks : 1

Question Key Details :

Key	Value
Comprehension	MCQ

Fill in the blanks with suitable Articles.

January is _____ first month of _____ year.

Choose the appropriate option :

- (1) a, an
- (2) The, an
- (3) A, The
- (4) The The

Options :

54025064385. 1

54025064386. 2

54025064387. 3

54025064388. 4

Question Number : 28 Question Id : 54025016098 Question Type : MCQ Option Shuffling : No

Is Question Mandatory : No Calculator : None Response Time : N.A Think Time : N.A

Minimum Instruction Time : 0

Correct Marks : 5 Wrong Marks : 1

Question Key Details :

Key	Value
Comprehension	MCQ

Change the sentence given below into an Exclamatory sentence.

Man is a wonderful piece of work.

- (1) What piece of work is man !
- (2) A piece of work is man !
- (3) Man is a wonderful work !
- (4) A piece of work, oh! a man.

Options :

54025064389. 1

54025064390. 2

54025064391. 3

54025064392. 4

Question Number : 29 Question Id : 54025016099 Question Type : MCQ Option Shuffling : No

Is Question Mandatory : No Calculator : None Response Time : N.A Think Time : N.A

Minimum Instruction Time : 0

Correct Marks : 5 Wrong Marks : 1

Question Key Details :

Key	Value
Comprehension	MCQ

Change the sentence into Assertive sentence :

How beautiful is the night !

- (1) The beautiful night is today.
- (2) The night must be beautiful.
- (3) The night is not beautiful.
- (4) The night is very beautiful.

Options :

54025064393. 1

54025064394. 2

54025064395. 3

54025064396. 4

Question Number : 30 Question Id : 54025016100 Question Type : MCQ Option Shuffling : No

Is Question Mandatory : No Calculator : None Response Time : N.A Think Time : N.A

Minimum Instruction Time : 0

Correct Marks : 5 Wrong Marks : 1

Question Key Details :

Key	Value
Comprehension	MCQ

Choose the **correct** alternative from the options for the underlined words. In case your response is 'No Improvement' mark that as your answer.

Children should be taught to write by a fountain pen.

- (1) No Improvement
- (2) Through
- (3) with
- (4) from

Options :

54025064397. 1

54025064398. 2

54025064399. 3

Question Number : 31 Question Id : 54025016101 Question Type : MCQ Option Shuffling : No

Is Question Mandatory : No Calculator : None Response Time : N.A Think Time : N.A

Minimum Instruction Time : 0

Correct Marks : 5 Wrong Marks : 1

Question Key Details :

Key	Value
Comprehension	MCQ

Choose the appropriate alternative for the underlined word.

You should at least congratulate your friend for his grand success in the elections.

- (1) at
- (2) on
- (3) upon
- (4) to

Options :

54025064401. 1

54025064402. 2

54025064403. 3

54025064404. 4

Question Number : 32 Question Id : 54025016102 Question Type : MCQ Option Shuffling : No

Is Question Mandatory : No Calculator : None Response Time : N.A Think Time : N.A

Minimum Instruction Time : 0

Correct Marks : 5 Wrong Marks : 1

Question Key Details :

Key	Value
Comprehension	MCQ

Choose the correct option from the following.

Work hard lest you _____ fail.

- (1) will
- (2) should not
- (3) could
- (4) should

Options :

54025064405. 1

54025064406. 2

54025064407. 3

54025064408. 4

Question Number : 33 Question Id : 54025016103 Question Type : MCQ Option Shuffling : No

Is Question Mandatory : No Calculator : None Response Time : N.A Think Time : N.A

Minimum Instruction Time : 0

Correct Marks : 5 Wrong Marks : 1

Question Key Details :

Key	Value
Comprehension	MCQ

Fill in the blank with suitable word from the given options :

_____ I switch the air conditioner on ?

- (1) Will
- (2) Should
- (3) Must
- (4) Shall

Options :

54025064409. 1

54025064410. 2

54025064411. 3

54025064412. 4

**Question Number : 34 Question Id : 54025016104 Question Type : MCQ Option Shuffling : No
Is Question Mandatory : No Calculator : None Response Time : N.A Think Time : N.A
Minimum Instruction Time : 0**

Correct Marks : 5 Wrong Marks : 1

Question Key Details :

Key	Value
Comprehension	MCQ

From the given options, choose the **correct** way to end an informed letter.

- (1) your faithfully
- (2) yours faithfully
- (3) yours truly
- (4) yours truthfully

Options :

54025064413. 1

54025064414. 2

54025064415. 3

54025064416. 4

**Question Number : 35 Question Id : 54025016105 Question Type : MCQ Option Shuffling : No
Is Question Mandatory : No Calculator : None Response Time : N.A Think Time : N.A
Minimum Instruction Time : 0**

Correct Marks : 5 Wrong Marks : 1

Question Key Details :

Key	Value
Comprehension	MCQ

Arrange the following parts in Letter Writing in its **correct** sequence :

- (A) Date
- (B) Subject
- (C) Salutation
- (D) Sender's Address
- (E) Receiver's Address

Choose the **correct** answer from the options given below :

- (1) (A), (B), (E), (D), (C)
- (2) (B), (D), (E), (A), (C)
- (3) (D), (A), (E), (B), (C)
- (4) (C), (D), (E), (A), (B)

Options :

54025064417. 1

54025064418. 2

54025064419. 3

54025064420. 4

Question Number : 36 Question Id : 54025016106 Question Type : MCQ Option Shuffling : No

Is Question Mandatory : No Calculator : None Response Time : N.A Think Time : N.A

Minimum Instruction Time : 0

Correct Marks : 5 Wrong Marks : 1

Question Key Details :

Key	Value
Comprehension	MCQ

Spot the error in the given parts of a sentence. In case of no error, mark that option as your answer.

- (A) This girl wrote the essay
- (B) So well
- (C) that her teacher was exceedingly
- (D) pleased with it.
- (E) No error

Choose the **correct** answer from the options given below :

- (1) (C) Only
- (2) (A) and (B) Only
- (3) (E) Only
- (4) (D) Only

Options :

54025064421. 1

54025064422. 2

54025064423. 3

54025064424. 4

Question Number : 37 Question Id : 54025016107 Question Type : MCQ Option Shuffling : No

Is Question Mandatory : No Calculator : None Response Time : N.A Think Time : N.A

Minimum Instruction Time : 0

Correct Marks : 5 Wrong Marks : 1

Question Key Details :

Key	Value
Comprehension	MCQ

Spot the error in the given parts of a sentence.

In case of no error, mark that option as your answer.

- (A) Magic realism is one
- (B) of the latest
- (C) addition to good literature
- (D) published to good recent tunes
- (E) No error

Choose the **correct** answer from the options given below :

- (1) (B) Only
- (2) (C) and (D) Only
- (3) (C) Only
- (4) (E) Only

Options :

54025064425. 1

54025064426. 2

54025064427. 3

54025064428. 4

Question Number : 38 Question Id : 54025016108 Question Type : MCQ Option Shuffling : No

Is Question Mandatory : No Calculator : None Response Time : N.A Think Time : N.A

Minimum Instruction Time : 0

Correct Marks : 5 Wrong Marks : 1

Question Key Details :

Key	Value
Comprehension	MCQ

From the following options, choose the option with the **correct** use of the plural verb :

- (1) As I entered the conference hall, I hanged the conspiracy.
- (2) As I entered the conference hall, I got the hang of the conspiracy.
- (3) As I entered the conference hall, I got the conspiracy hanged.
- (4) As I entered the conference hall, I got the hang out of the conspiracy.

Options :

54025064429. 1

54025064430. 2

54025064431. 3

54025064432. 4

Question Number : 39 Question Id : 54025016109 Question Type : MCQ Option Shuffling : No

Is Question Mandatory : No Calculator : None Response Time : N.A Think Time : N.A

Minimum Instruction Time : 0

Correct Marks : 5 Wrong Marks : 1

Question Key Details :

Key	Value
Comprehension	MCQ

Match phrasal verbs in **List - I** with their meanings in **List - II** :

List - I

- (A) set about
- (B) set aside
- (C) set off
- (D) set up

List - II

- (I) allocated
- (II) to start a series of events
- (III) started doing
- (IV) established

Choose the **correct** answer from the options given below :

- (1) (A)-(III), (B)-(I), (C)-(II), (D)-(IV)
- (2) (A)-(I), (B)-(II), (C)-(III), (D)-(IV)
- (3) (A)-(IV), (B)-(I), (C)-(II), (D)-(III)
- (4) (A)-(II), (B)-(III), (C)-(I), (D)-(IV)

Options :

54025064433. 1

54025064434. 2

54025064435. 3

54025064436. 4

Question Number : 40 Question Id : 54025016110 Question Type : MCQ (

Is Question Mandatory : No Calculator : None Response Time : N.A Think Time : N.A

Minimum Instruction Time : 0

Correct Marks : 5 Wrong Marks : 1

Question Key Details :

Key	Value
Comprehension	MCQ

Fill in the blanks with the appropriate pair of homonyms :

His _____ up the cooperate ladder is weirdly attributed to his American _____.

- (1) accent, ascent
- (2) ascent, accent
- (3) ascent, extent
- (4) extend, accent

Options :

54025064437. 1

54025064438. 2

54025064439. 3

54025064440. 4

Question Number : 41 Question Id : 54025016111 Question Type : MCQ Option Shuffling : No

Is Question Mandatory : No Calculator : None Response Time : N.A Think Time : N.A

Minimum Instruction Time : 0

Correct Marks : 5 Wrong Marks : 1

Question Key Details :

Key	Value
Comprehension	MCQ

Rearrange the jumbled phrases to make a meaningful sentence :

- (A) having visited Europe
- (B) nor French
- (C) many times but he
- (D) He boasts of
- (E) can speak neither English

Choose the **correct** answer from the options given below :

- (1) (A), (C), (D), (B), (E)
- (2) (D), (A), (C), (E), (B)
- (3) (E), (B), (C), (D), (E)
- (4) (A), (D), (C), (E), (B)

Options :

- 54025064441. 1
- 54025064442. 2
- 54025064443. 3
- 54025064444. 4

Question Number : 42 Question Id : 54025016112 Question Type : MCQ Option Shuffling : No

Is Question Mandatory : No Calculator : None Response Time : N.A Think Time : N.A

Minimum Instruction Time : 0

Correct Marks : 5 Wrong Marks : 1

Question Key Details :

Key	Value
Comprehension	MCQ

Choose the appropriate Antonym of 'exalted' from the words given below :

- (1) undignified
- (2) eulogize
- (3) prime
- (4) nuisance

Options :

- 54025064445. 1

54025064446. 2

54025064447. 3

54025064448. 4

Question Number : 43 Question Id : 54025016113 Question Type : MCQ Option Shuffling : No

Is Question Mandatory : No Calculator : None Response Time : N.A Think Time : N.A

Minimum Instruction Time : 0

Correct Marks : 5 Wrong Marks : 1

Question Key Details :

Key	Value
Comprehension	MCQ

Choose the **correct** Synonym of the underlined word.

His puerile attitude could prove to be the biggest hurdle in his career.

- (1) Childish
- (2) Wise
- (3) Soothing
- (4) Shallow

Options :

54025064449. 1

54025064450. 2

54025064451. 3

54025064452. 4

Question Number : 44 Question Id : 54025016114 Question Type : MCQ Option Shuffling : No

Is Question Mandatory : No Calculator : None Response Time : N.A Think Time : N.A

Minimum Instruction Time : 0

Correct Marks : 5 Wrong Marks : 1

Question Key Details :

Key	Value
Comprehension	MCQ

Use an adverb of manner in the following interrogative sentence :

_____ did you continue it ?

- (1) Where
- (2) How
- (3) When
- (4) Why

Options :

54025064453. 1

54025064454. 2

54025064455. 3

54025064456. 4

Question Number : 45 Question Id : 54025016115 Question Type : MCQ Option Shuffling : No

Is Question Mandatory : No Calculator : None Response Time : N.A Think Time : N.A

Minimum Instruction Time : 0

Correct Marks : 5 Wrong Marks : 1

Question Key Details :

Key	Value
Comprehension	MCQ

Identify the type of adverb used in the following sentence :

I am much aliened to have it.

- (1) Adverb of Frequency
- (2) Adverb of Manner
- (3) Adverb of Reason
- (4) Adverb of Degree

Options :

54025064457. 1

54025064458. 2

54025064459. 3

54025064460. 4

Question Number : 46 Question Id : 54025016116 Question Type : MCQ Option Shuffling : No Is Question Mandatory : No Calculator : None Response Time : N.A Think Time : N.A Minimum Instruction Time : 0

Correct Marks : 5 Wrong Marks : 1

Question Key Details :

Key	Value
Comprehension	MCQ

Use the **correct** Question for the given sentence :

I am always on time, _____ ?

- (1) amn't I
- (2) am I
- (3) aren't I
- (4) wasn't I

Options :

- 54025064461. 1
- 54025064462. 2
- 54025064463. 3
- 54025064464. 4

Question Number : 47 Question Id : 54025016117 Question Type : MCQ Option Shuffling : No Is Question Mandatory : No Calculator : None Response Time : N.A Think Time : N.A Minimum Instruction Time : 0

Correct Marks : 5 Wrong Marks : 1

Question Key Details :

Key	Value
Comprehension	MCQ

Choose the grammatically correct form of the sentence below from the options given.

My uncle is enough rich to buy a car.

- (1) My uncle is rich enough to buy a car.
- (2) My uncle is richer enough to buy a car.
- (3) My uncle in enough richer to buy a car.
- (4) No error

Options :

54025064465. 1

54025064466. 2

54025064467. 3

54025064468. 4

Question Number : 48 Question Id : 54025016118 Question Type : MCQ Option Shuffling : No

Is Question Mandatory : No Calculator : None Response Time : N.A Think Time : N.A

Minimum Instruction Time : 0

Correct Marks : 5 Wrong Marks : 1

Question Key Details :

Key	Value
Comprehension	MCQ

Match the Idioms in the List - I to their correct meanings in List - II.

List - I

- (A) Under a cloud
- (B) Moot point
- (C) Halcyon days
- (D) Bird's eye view

List - II

- (I) Peaceful period
- (II) A concise view
- (III) In a suspicious position
- (IV) Debatable or undecided

Choose the correct answer from the options given below :

- (1) (A)-(II), (B)-(I), (C)-(IV), (D)-(III)
- (2) (A)-(III), (B)-(IV), (C)-(I), (D)-(II)
- (3) (A)-(I), (B)-(II), (C)-(III), (D)-(IV)
- (4) (A)-(IV), (B)-(III), (C)-(II), (D)-(I)

Options :

54025064469. 1

54025064470. 2

54025064471. 3

54025064472. 4

Question Number : 49 Question Id : 54025016119 Question Type : MCQ Option Shuffling : No

Is Question Mandatory : No Calculator : None Response Time : N.A Think Time : N.A

Minimum Instruction Time : 0

Correct Marks : 5 Wrong Marks : 1

Question Key Details :

Key	Value
Comprehension	MCQ

Choose the most appropriate meaning of the underlined idiom :

Most of the political parties pay lip service to the plight of the poor.

- (1) pay no attention
- (2) blame each other
- (3) pretend to regard
- (4) to pay clearly

Options :

54025064473. 1

54025064474. 2

54025064475. 3

54025064476. 4

Question Number : 50 Question Id : 54025016120 Question Type : MCQ Option Shuffling : No**Is Question Mandatory : No Calculator : None Response Time : N.A Think Time : N.A****Minimum Instruction Time : 0****Correct Marks : 5 Wrong Marks : 1****Question Key Details :**

Key	Value
Comprehension	MCQ

Identify the Adjective Clause in the following sentence :

As the years went by, her prose became more interesting and soon, she was offered a book deal.

- (1) As the years went by
- (2) her prose became more interesting
- (3) and soon, she was offered
- (4) a book deal

Options :

54025064477. 1

54025064478. 2

54025064479. 3

54025064480. 4

Biology**Group Number :** 2**Group Id :** 540250335

Group Maximum Duration :	45
Group Minimum Duration :	45
Show Attended Group? :	No
Edit Attended Group? :	No
Break time :	0
Group Marks :	200
Is this Group for Examiner? :	No
Examiner permission :	Cant View
Show Progress Bar? :	No

Biology

Section Id :	540250405
Section Number :	1
Section type :	Online
Mandatory or Optional :	Mandatory
Number of Questions :	50
Number of Questions to be attempted :	40
Section Marks :	200
Enable Mark as Answered Mark for Review and Clear Response :	Yes
Maximum Instruction Time :	0
Sub-Section Number :	1
Sub-Section Id :	5402501138
Question Shuffling Allowed :	Yes
Is Section Default? :	null

Question Number : 51 Question Id : 54025016021 Question Type : MCQ Option Shuffling : No
Is Question Mandatory : No Calculator : None Response Time : N.A Think Time : N.A
Minimum Instruction Time : 0

Correct Marks : 5 Wrong Marks : 1

Question Key Details :

Key	Value
Comprehension	MCQ

Cell division itself a mode of reproduction in organisms like :

- (A) Yeast
- (B) Amoeba
- (C) Paramecium
- (D) Fruitfly

Choose the **correct** answer from the options given below :

- (1) (A) Only
- (2) (B) & (D) Only
- (3) (D) Only
- (4) (A), (B) & (C) Only

Options :

54025064081. 1

54025064082. 2

54025064083. 3

54025064084. 4

Question Number : 51 Question Id : 54025016021 Question Type : MCQ Option Shuffling : No

Is Question Mandatory : No Calculator : None Response Time : N.A Think Time : N.A

Minimum Instruction Time : 0

Correct Marks : 5 Wrong Marks : 1

Question Key Details :

Key	Value
Comprehension	MCQ

कोशिका विभाजन स्वयं में जीवों की जनन प्रणाली है जैसे :

- (A) यीस्ट
- (B) अमीबा
- (C) पैरामीसियम
- (D) फ्रूटफ्लाई

निम्नलिखित में से सही उत्तर का चयन कीजिए :

- (1) केवल (A)
- (2) केवल (B) और (D)
- (3) केवल (D)
- (4) केवल (A), (B) और (C)

Options :

54025064081. 1

54025064082. 2

54025064083. 3

54025064084. 4

Question Number : 52 Question Id : 54025016022 Question Type : MCQ Option Shuffling : No

Is Question Mandatory : No Calculator : None Response Time : N.A Think Time : N.A

Minimum Instruction Time : 0

Correct Marks : 5 Wrong Marks : 1

Question Key Details :

Key	Value
Comprehension	MCQ

The vegetative propagate in Agave is called :

- (1) Leaf buds
- (2) Offset
- (3) Bulbil
- (4) Rhizome

Options :

54025064085. 1

54025064086. 2

54025064087. 3

54025064088. 4

Question Number : 52 Question Id : 54025016022 Question Type : MCQ Option Shuffling : No

Is Question Mandatory : No Calculator : None Response Time : N.A Think Time : N.A

Minimum Instruction Time : 0

Correct Marks : 5 Wrong Marks : 1

Question Key Details :

Key	Value
Comprehension	MCQ

ऐगेव में कायिक प्रवर्धन को कहते है :

- (1) पत्र कलिका
- (2) भूस्तरिका
- (3) बुलबिल
- (4) प्रकंद

Options :

54025064085. 1

54025064086. 2

54025064087. 3

54025064088. 4

Question Number : 53 Question Id : 54025016023 Question Type : MCQ Option Shuffling : No

Is Question Mandatory : No Calculator : None Response Time : N.A Think Time : N.A

Minimum Instruction Time : 0

Correct Marks : 5 Wrong Marks : 1

Question Key Details :

Key	Value
Comprehension	MCQ

In a typical angiosperm, the mature embryo sac is :

- (1) 8 nucleated, 7 celled
- (2) 7 nucleated, 8 celled
- (3) 7 nucleated, 7 celled
- (4) 8 nucleated, 8 celled

Options :

54025064089. 1

54025064090. 2

54025064091. 3

54025064092. 4

Question Number : 53 Question Id : 54025016023 Question Type : MCQ Option Shuffling : No

Is Question Mandatory : No Calculator : None Response Time : N.A Think Time : N.A

Minimum Instruction Time : 0

Correct Marks : 5 Wrong Marks : 1

Question Key Details :

Key	Value
Comprehension	MCQ

ऐंजियोस्पर्म में पक्व भ्रूण है :

- (1) 8 आकेन्द्रित, 7 कोषिय
- (2) 7 आकेन्द्रित, 8 कोषिय
- (3) 7 आकेन्द्रित, 7 कोषिय
- (4) 8 आकेन्द्रित, 8 कोषिय

Options :

54025064089. 1

54025064090. 2

54025064091. 3

54025064092. 4

Question Number : 54 Question Id : 54025016024 Question Type : MCQ (



collegedunia

Is Question Mandatory : No Calculator : None Response Time : N.A Think Time : N.A

Minimum Instruction Time : 0

Correct Marks : 5 Wrong Marks : 1

Question Key Details :

Key	Value
Comprehension	MCQ

Maximum number of male gametes produced from one pollen mother cell (microspore mother cell) will be :

- (1) Two
- (2) Four
- (3) Eight
- (4) Sixteen

Options :

54025064093. 1

54025064094. 2

54025064095. 3

54025064096. 4

Question Number : 54 Question Id : 54025016024 Question Type : MCQ Option Shuffling : No

Is Question Mandatory : No Calculator : None Response Time : N.A Think Time : N.A

Minimum Instruction Time : 0

Correct Marks : 5 Wrong Marks : 1

Question Key Details :

Key	Value
Comprehension	MCQ

एक लघुबीजाणु घानी मदा कोशिका से अधिकतम कितने नर युग्मक उत्पन्न होंगे :

- (1) दो
- (2) चार
- (3) आठ
- (4) सोलह

Options :

54025064093. 1

54025064094. 2

54025064095. 3

54025064096. 4

Question Number : 55 Question Id : 54025016025 Question Type : MCQ Option Shuffling : No

Is Question Mandatory : No Calculator : None Response Time : N.A Think Time : N.A

Minimum Instruction Time : 0

Correct Marks : 5 Wrong Marks : 1

Question Key Details :

Key	Value
Comprehension	MCQ

Which of the following hormone is **not** secreted by placenta ?

- (1) Estrogens
- (2) Progestogens
- (3) Relaxin
- (4) Human chorionic gonadotropin

Options :

54025064097. 1

54025064098. 2

54025064099. 3

54025064100. 4

Question Number : 55 Question Id : 54025016025 Question Type : MCQ Option Shuffling : No

Is Question Mandatory : No Calculator : None Response Time : N.A Think Time : N.A

Minimum Instruction Time : 0

Correct Marks : 5 Wrong Marks : 1

Question Key Details :

Key	Value
-----	-------

निम्नलिखित में है कौन सा हारमोन से सत्तावित नहीं होता है ?

- (1) ऐस्ट्रोजन
- (2) प्रोजेस्टोजन
- (3) रिलेक्सिन
- (4) मानव जरायु गोनैडोट्रोपिन

Options :

54025064097. 1

54025064098. 2

54025064099. 3

54025064100. 4

Question Number : 56 Question Id : 54025016026 Question Type : MCQ Option Shuffling : No

Is Question Mandatory : No Calculator : None Response Time : N.A Think Time : N.A

Minimum Instruction Time : 0

Correct Marks : 5 Wrong Marks : 1

Question Key Details :

Key	Value
Comprehension	MCQ

Which one of the following is **NOT** the function of Leyding cells ?

- (1) Synthesis Androgens
- (2) Secretes Androgens
- (3) Immunologically competent cells are present in it
- (4) Stimulate secretion of some factors which help in the process of Spermiogenesis

Options :

54025064101. 1

54025064102. 2

54025064103. 3

54025064104. 4

Question Number : 56 Question Id : 54025016026 Question Type : MCQ Option Shuffling : No

Is Question Mandatory : No Calculator : None Response Time : N.A Think Time : N.A

Minimum Instruction Time : 0

Correct Marks : 5 Wrong Marks : 1

Question Key Details :

Key	Value
Comprehension	MCQ

निम्नलिखित में से कौन सा हार्मोन लीडिंग कोशिका का कार्य नहीं है?

- (1) ऐन्ड्रोजन संश्लेषण
- (2) ऐन्ड्रोजन स्त्रवण
- (3) प्रतिरक्षी समर्थ कोशिकाएं उपस्थित होती हैं
- (4) कुछ उद्दीपन कारक स्त्रावक शुक्राणुजनन की प्रक्रिया में सहायक होते हैं।

Options :

54025064101. 1

54025064102. 2

54025064103. 3

54025064104. 4

Question Number : 57 Question Id : 54025016027 Question Type : MCQ Option Shuffling : No

Is Question Mandatory : No Calculator : None Response Time : N.A Think Time : N.A

Minimum Instruction Time : 0

Correct Marks : 5 Wrong Marks : 1

Question Key Details :

Key	Value
Comprehension	MCQ

Which one of the following is most widely accepted method of contraception in India ?

- (1) Vasectomy
- (2) Coitus interruptus
- (3) IUDs
- (4) Implants

Options :

54025064105. 1

54025064106. 2

54025064107. 3

54025064108. 4

Question Number : 57 Question Id : 54025016027 Question Type : MCQ Option Shuffling : No**Is Question Mandatory : No Calculator : None Response Time : N.A Think Time : N.A****Minimum Instruction Time : 0****Correct Marks : 5 Wrong Marks : 1****Question Key Details :**

Key	Value
Comprehension	MCQ

निम्नलिखित में से कौन सा गर्भनिरोधक साधन भारत में सर्वमान्य है ?

- (1) शुक्रवाहक-उच्छेदन
- (2) कोईटस अंतरायन
- (3) इंटरा यूटेराइन ट्रांसफर
- (4) अंतरोप

Options :

54025064105. 1

54025064106. 2

54025064107. 3

54025064108. 4

Question Number : 58 Question Id : 54025016028 Question Type : MCQ Option Shuffling : No**Is Question Mandatory : No Calculator : None Response Time : N.A Think Time : N.A****Minimum Instruction Time : 0****Correct Marks : 5 Wrong Marks : 1****Question Key Details :**

Key	Value
Comprehension	MCQ

Which one among the following contraceptive, inhibits ovulation and implantation of female reproductive system ?

- (1) Oral pills
- (2) Lippes loop
- (3) Condoms
- (4) Tubectomy

Options :

54025064109. 1

54025064110. 2

54025064111. 3

54025064112. 4

Question Number : 58 Question Id : 54025016028 Question Type : MCQ Option Shuffling : No

Is Question Mandatory : No Calculator : None Response Time : N.A Think Time : N.A

Minimum Instruction Time : 0

Correct Marks : 5 Wrong Marks : 1

Question Key Details :

Key	Value
Comprehension	MCQ

निम्नलिखित में से कौन सी बंध्यकरण विधि अंडजनन और मादा जनन तंत्र का रोपण करते हैं ?

- (1) मुख की गोलियां
- (2) लिप्पेस लूप
- (3) निरोध
- (4) नलिका उच्छेदन

Options :

54025064109. 1

54025064110. 2

54025064111. 3

54025064112. 4

Question Number : 59 Question Id : 54025016029 Question Type : MCQ Option Shuffling : No

Is Question Mandatory : No Calculator : None Response Time : N.A Think Time : N.A

Minimum Instruction Time : 0

Correct Marks : 5 Wrong Marks : 1

Question Key Details :

Key	Value
Comprehension	MCQ

The genetic disorder caused due to presence of an additional copy of the chromosome number 21 is :

- (1) Down's syndrome
- (2) Klinefelter syndrome
- (3) Turner's syndrome
- (4) Haemophilia

Options :

54025064113. 1

54025064114. 2

54025064115. 3

54025064116. 4

Question Number : 59 Question Id : 54025016029 Question Type : MCQ Option Shuffling : No

Is Question Mandatory : No Calculator : None Response Time : N.A Think Time : N.A

Minimum Instruction Time : 0

Correct Marks : 5 Wrong Marks : 1

Question Key Details :

Key	Value
Comprehension	MCQ

वह आनुवांशिक विकार जो 21 वें गुणसूत्र को प्रतिलिपि के कारण होता है :

- (1) डाउन सिंड्रोम
- (2) क्लाइन फ़ैल्टर सिंड्रोम
- (3) टर्नर सिंड्रोम
- (4) हीमोफीलिया

Options :

54025064113. 1

54025064114. 2

54025064115. 3

54025064116. 4

Question Number : 60 Question Id : 54025016030 Question Type : MCQ Option Shuffling : No

Is Question Mandatory : No Calculator : None Response Time : N.A Think Time : N.A

Minimum Instruction Time : 0

Correct Marks : 5 Wrong Marks : 1

Question Key Details :

Key	Value
Comprehension	MCQ

In a garden pea, the axial flower is dominant to terminal flower. What will be the percentage of offsprings with terminal flowers, when two heterozygous plants are crossed ?

- (1) 25%
- (2) 50%
- (3) 75%
- (4) 0%

Options :

54025064117. 1

54025064118. 2

54025064119. 3

54025064120. 4

Question Number : 60 Question Id : 54025016030 Question Type : MCQ Option Shuffling : No

Is Question Mandatory : No Calculator : None Response Time : N.A Think Time : N.A

Minimum Instruction Time : 0

Correct Marks : 5 Wrong Marks : 1

Question Key Details :

Key	Value
Comprehension	MCQ

एक मटर के बांग में, अक्षीय पुष्प, अंतिम पुष्प से अधिक प्रभावी है। अंतिम पुष्प बांली संतति का क्या प्रतिशत होगा, यदि दो विषम युग्मजी पौधों को क्रॉस किया गया है?

- (1) 25%
- (2) 50%
- (3) 75%
- (4) 0%

Options :

54025064117. 1

54025064118. 2

54025064119. 3

54025064120. 4

Question Number : 61 Question Id : 54025016031 Question Type : MCQ Option Shuffling : No

Is Question Mandatory : No Calculator : None Response Time : N.A Think Time : N.A

Minimum Instruction Time : 0

Correct Marks : 5 Wrong Marks : 1

Question Key Details :

Key	Value
Comprehension	MCQ

A classical example of mutation arise due to change in a single base pair of DNA is :

- (1) Sickle cell anaemia
- (2) Thalassemia
- (3) Colour blindness
- (4) Cystic fibrosis

Options :

54025064121. 1

54025064122. 2

54025064123. 3

54025064124. 4

Question Number : 61 Question Id : 54025016031 Question Type : MCQ Option Shuffling : No**Is Question Mandatory : No Calculator : None Response Time : N.A Think Time : N.A****Minimum Instruction Time : 0****Correct Marks : 5 Wrong Marks : 1****Question Key Details :**

Key	Value
Comprehension	MCQ

एवं चिर प्रतिष्ठित उत्परिवर्तन का उदाहरण डी.एन.ए के एक क्षारीय यग्म के कारण है?

- (1) दात्र कोशिका अरक्तता
- (2) थैलासीमिया
- (3) वर्णाधता
- (4) सिस्टिक फाइब्रोसिस

Options :

54025064121. 1

54025064122. 2

54025064123. 3

54025064124. 4

Question Number : 62 Question Id : 54025016032 Question Type : MCQ Option Shuffling : No**Is Question Mandatory : No Calculator : None Response Time : N.A Think Time : N.A****Minimum Instruction Time : 0****Correct Marks : 5 Wrong Marks : 1****Question Key Details :**

Key	Value
Comprehension	MCQ

The steps of DNA fingerprinting are given below. Arrange them in a correct sequence.

- (A) Separation of DNA fragments by electrophoresis
- (B) Hybridisation using labelled VNTR probe
- (C) Isolation and digestion of DNA
- (D) Detection of hybridised DNA fragments by autoradiography
- (E) Transferring of separated DNA fragments to synthetic membranes

Choose the **correct** answer from the options given below :

- (1) (C), (B), (A), (E), (D)
- (2) (A), (C), (D), (B), (E)
- (3) (C), (A), (E), (B), (D)
- (4) (B), (E), (D), (A), (C)

Options :

54025064125. 1

54025064126. 2

54025064127. 3

54025064128. 4

Question Number : 62 Question Id : 54025016032 Question Type : MCQ Option Shuffling : No

Is Question Mandatory : No Calculator : None Response Time : N.A Think Time : N.A

Minimum Instruction Time : 0

Correct Marks : 5 Wrong Marks : 1

Question Key Details :

Key	Value
Comprehension	MCQ

निम्नलिखित पदों में डी एन ए अगुलिछापी पूर्ण होती है। सही आरोही क्रम में व्यवस्थित कीजिए।

- (A) इलेक्ट्रोफोरेसिस द्वारा डी.एन.ए. खंडों का पृथाक्करण
- (B) चिन्हित वी.एन.टी.आर प्रोब का उपयोग करते हुए संकरण
- (C) डी.एन.ए. का विलगन और पाचन
- (D) स्वविकिरणी चित्रण द्वारा संकरित डी.एन.ए. खंडों का पता लगाना
- (E) पृथक्करण, डी.एन.ए. खंडों का संश्लेषित झिल्ली द्वारा

निम्नलिखित विकल्पों में से सही उत्तर का चयन कीजिए :

- (1) (A), (B), (A), (E), (D)
- (2) (A), (C), (D), (B), (E)
- (3) (C), (A), (E), (B), (D)
- (4) (B), (E), (D), (A), (C)

Options :

54025064125. 1

54025064126. 2

54025064127. 3

54025064128. 4

Question Number : 63 Question Id : 54025016033 Question Type : MCQ Option Shuffling : No

Is Question Mandatory : No Calculator : None Response Time : N.A Think Time : N.A

Minimum Instruction Time : 0

Correct Marks : 5 Wrong Marks : 1

Question Key Details :

Key	Value
Comprehension	MCQ

Match List - I with List - II.

List - I

List - II

- | | |
|------------------------|---------------------------|
| (A) RNA Polymerase II | (I) 28 srRNA |
| (B) RNA Polymerase I | (II) hn RNA |
| (C) Ribosome | (III) 5 srRNA |
| (D) RNA Polymerase III | (IV) 23 srRNA in bacteria |

Choose the **correct** answer from the options given below :

- (1) (A)-(III), (B)-(II), (C)-(I), (D)-(IV)
- (2) (A)-(II), (B)-(IV), (C)-(III), (D)-(I)
- (3) (A)-(II), (B)-(I), (C)-(IV), (D)-(III)
- (4) (A)-(IV), (B)-(III), (C)-(II), (D)-(I)

Options :

54025064129. 1

54025064130. 2

54025064131. 3

54025064132. 4

Question Number : 63 Question Id : 54025016033 Question Type : MCQ Option Shuffling : No

Is Question Mandatory : No Calculator : None Response Time : N.A Think Time : N.A

Minimum Instruction Time : 0

Correct Marks : 5 Wrong Marks : 1

Question Key Details :

Key	Value
Comprehension	MCQ

सूची - I का सूची - II से मिलान करें।

सूची - I

सूची - II

- | | |
|----------------------|--------------------------|
| (A) RNA पॉलीमरेज II | (I) 28 srRNA |
| (B) RNA पॉलीमरेज I | (II) hn RNA |
| (C) राइबोजाइम | (III) 5 srRNA |
| (D) RNA पॉलीमरेज III | (IV) 23 srRNA जीवाणु में |

निम्नलिखित विकल्पों में से सही उत्तर का चयन कीजिए :

- (1) (A)-(III), (B)-(II), (C)-(I), (D)-(IV)
- (2) (A)-(II), (B)-(IV), (C)-(III), (D)-(I)
- (3) (A)-(II), (B)-(I), (C)-(IV), (D)-(III)
- (4) (A)-(IV), (B)-(III), (C)-(II), (D)-(I)

Options :

54025064129. 1

54025064130. 2

54025064131. 3

54025064132. 4

Question Number : 64 Question Id : 54025016034 Question Type : MCQ Option Shuffling : No

Is Question Mandatory : No Calculator : None Response Time : N.A Think Time : N.A

Minimum Instruction Time : 0

Correct Marks : 5 Wrong Marks : 1

Question Key Details :

Key	Value
Comprehension	MCQ

The size of VNTR varies from :

- (1) 0.1 to 20 kb
- (2) 0.2 to 10 bp
- (3) 0.1 to 10 kb
- (4) 0.2 to 20 kb

Options :

54025064133. 1

54025064134. 2

54025064135. 3

54025064136. 4

Question Number : 64 Question Id : 54025016034 Question Type : MCQ Option Shuffling : No**Is Question Mandatory : No Calculator : None Response Time : N.A Think Time : N.A****Minimum Instruction Time : 0****Correct Marks : 5 Wrong Marks : 1****Question Key Details :**

Key	Value
Comprehension	MCQ

VNTR का आकार परिवर्तित होता है :

- (1) 0.1 से 20 kb
- (2) 0.2 से 10 bp
- (3) 0.1 से 10 kb
- (4) 0.2 से 20 kb

Options :

54025064133. 1

54025064134. 2

54025064135. 3

54025064136. 4

Question Number : 65 Question Id : 54025016035 Question Type : MCQ Option Shuffling : No**Is Question Mandatory : No Calculator : None Response Time : N.A Think Time : N.A****Minimum Instruction Time : 0****Correct Marks : 5 Wrong Marks : 1****Question Key Details :**

Key	Value
Comprehension	MCQ

Brain capacities of *Homo erectus* was around :

- (1) 900 cc
- (2) 650 - 800 cc
- (3) 1400 cc
- (4) 650 cc

Options :

54025064137. 1

54025064138. 2

54025064139. 3

54025064140. 4

Question Number : 65 Question Id : 54025016035 Question Type : MCQ Option Shuffling : No

Is Question Mandatory : No Calculator : None Response Time : N.A Think Time : N.A

Minimum Instruction Time : 0

Correct Marks : 5 Wrong Marks : 1

Question Key Details :

Key	Value
Comprehension	MCQ

होमो इरिक्टस का मस्तिष्क अनुमानित था :

- (1) 900 cc
- (2) 650 - 800 cc
- (3) 1400 cc
- (4) 650 cc

Options :

54025064137. 1

54025064138. 2

54025064139. 3

54025064140. 4

**Question Number : 66 Question Id : 54025016036 Question Type : MCQ Option Shuffling : No
Is Question Mandatory : No Calculator : None Response Time : N.A Think Time : N.A
Minimum Instruction Time : 0**

Correct Marks : 5 Wrong Marks : 1

Question Key Details :

Key	Value
Comprehension	MCQ

In Miller's experiment, the closed flask contained :

- (1) C_2H_6 , H_2 , N_2O and NH_3
- (2) CH_4 , H_2 , NH_3 and H_2O
- (3) CH_4 , O_2 , NO_2 and H_2O
- (4) CO_2 , H_2O , NH_3 and O_2

Options :

54025064141. 1

54025064142. 2

54025064143. 3

54025064144. 4

**Question Number : 66 Question Id : 54025016036 Question Type : MCQ Option Shuffling : No
Is Question Mandatory : No Calculator : None Response Time : N.A Think Time : N.A
Minimum Instruction Time : 0**

Correct Marks : 5 Wrong Marks : 1

Question Key Details :

Key	Value
Comprehension	MCQ

मिलर परीक्षण में बंद फ्लास्क में है :

- (1) C_2H_6 , H_2 , N_2O और NH_3
- (2) CH_4 , H_2 , NH_3 और H_2O
- (3) CH_4 , O_2 , NO_2 और H_2O
- (4) CO_2 , H_2O , NH_3 और O_2

Options :

54025064141. 1

54025064142. 2

54025064143. 3

54025064144. 4

Question Number : 67 Question Id : 54025016037 Question Type : MCQ Option Shuffling : No

Is Question Mandatory : No Calculator : None Response Time : N.A Think Time : N.A

Minimum Instruction Time : 0

Correct Marks : 5 Wrong Marks : 1

Question Key Details :

Key	Value
Comprehension	MCQ

Select the factor which does not affect Hardy-Weinberg Equilibrium ?

- (1) Genetic drift
- (2) Mutation
- (3) Genetic recombination
- (4) Random mating

Options :

54025064145. 1

54025064146. 2

54025064147. 3

54025064148. 4

Question Number : 67 Question Id : 54025016037 Question Type : MCQ (

Is Question Mandatory : No Calculator : None Response Time : N.A Think Time : N.A

Minimum Instruction Time : 0

Correct Marks : 5 Wrong Marks : 1

Question Key Details :

Key	Value
Comprehension	MCQ

उस घटक का चयन कीजिए जिससे हार्डी विनबर्ग साम्यावस्था प्रभावित नहीं होती :

- (1) अनुवांशिक अपवाह
- (2) उत्परिवर्तन
- (3) अनुवांशिक पुनः संयोजन
- (4) अनियमित मैथुन

Options :

54025064145. 1

54025064146. 2

54025064147. 3

54025064148. 4

Question Number : 68 Question Id : 54025016038 Question Type : MCQ Option Shuffling : No

Is Question Mandatory : No Calculator : None Response Time : N.A Think Time : N.A

Minimum Instruction Time : 0

Correct Marks : 5 Wrong Marks : 1

Question Key Details :

Key	Value
Comprehension	MCQ

Match List - I with List - II.

List - I

Disease

- (A) Pneumonia
- (B) Typhoid
- (C) Malaria
- (D) Filariasis

List - II

Pathogen

- (I) *Salmonella typhi*
- (II) *Plasmodium falciparum*
- (III) *Wuchereria bancrofti*
- (IV) *Haemophilus influenzae*

Choose the **correct** answer from the options given below :

- (1) (A)-(I), (B)-(IV), (C)-(III), (D)-(II)
- (2) (A)-(IV), (B)-(I), (C)-(II), (D)-(III)
- (3) (A)-(IV), (B)-(III), (C)-(I), (D)-(II)
- (4) (A)-(III), (B)-(I), (C)-(IV), (D)-(II)

Options :

54025064149. 1

54025064150. 2

54025064151. 3

54025064152. 4

Question Number : 68 Question Id : 54025016038 Question Type : MCQ Option Shuffling : No

Is Question Mandatory : No Calculator : None Response Time : N.A Think Time : N.A

Minimum Instruction Time : 0

Correct Marks : 5 Wrong Marks : 1

Question Key Details :

Key	Value
Comprehension	MCQ

सूची - I का सूची - II से मिलान करें।

सूची - I

रोग

सूची - II

प्याथोजन

- | | |
|-----------------|-----------------------------|
| (A) न्युमोनिया | (I) साल्मानेला टायफि |
| (B) टायफॉइड | (II) प्लाज्मोडियम फैलिसपेरम |
| (C) मलेरिया | (III) वुकेरिया बेन्क्रोफिट |
| (D) फाईलेरियसिस | (IV) हिमोफिलस इंप्लूँजी |

निम्नलिखित विकल्पों में से सही उत्तर का चयन कीजिए :

- (1) (A)-(I), (B)-(IV), (C)-(III), (D)-(II)
- (2) (A)-(IV), (B)-(I), (C)-(II), (D)-(III)
- (3) (A)-(IV), (B)-(III), (C)-(I), (D)-(II)
- (4) (A)-(III), (B)-(I), (C)-(IV), (D)-(II)

Options :

54025064149. 1

54025064150. 2

54025064151. 3

54025064152. 4

Question Number : 69 Question Id : 54025016039 Question Type : MCQ Option Shuffling : No

Is Question Mandatory : No Calculator : None Response Time : N.A Think Time : N.A

Minimum Instruction Time : 0

Correct Marks : 5 Wrong Marks : 1

Question Key Details :

Key	Value
Comprehension	MCQ

The symptoms of Elephantiasis :

- (A) Inflammation of lower limb
- (B) Scaly lesions on scalp
- (C) Anaemia and blockage of intestinal passage
- (D) Gross deformities of genital organs

Choose the **correct** answer from the options given below :

- (1) (A) Only
- (2) (B) and (C) Only
- (3) (C) and (D) Only
- (4) (A) and (D) Only

Options :

54025064153. 1

54025064154. 2

54025064155. 3

54025064156. 4

Question Number : 69 Question Id : 54025016039 Question Type : MCQ Option Shuffling : No

Is Question Mandatory : No Calculator : None Response Time : N.A Think Time : N.A

Minimum Instruction Time : 0

Correct Marks : 5 Wrong Marks : 1

Question Key Details :

Key	Value
Comprehension	MCQ

हस्तिपाद रोग के लक्षण :

- (A) नीचे के अंग में सूजन
- (B) शिरोवल्क पर शल्की विक्षतियां
- (C) अरक्तता और आंत्र मार्ग का आवरुद्ध होना
- (D) जननांगों का पूर्णतियां विकृत होना

निम्नलिखित विकल्पों में से सही उत्तर का चयन कीजिए :

- (1) केवल (A)
- (2) केवल (B) और (C)
- (3) केवल (C) और (D)
- (4) केवल (A) और (D)

Options :

54025064153. 1

54025064154. 2

54025064155. 3

54025064156. 4

Question Number : 70 Question Id : 54025016040 Question Type : MCQ Option Shuffling : No

Is Question Mandatory : No Calculator : None Response Time : N.A Think Time : N.A

Minimum Instruction Time : 0

Correct Marks : 5 Wrong Marks : 1

Question Key Details :

Key	Value
Comprehension	MCQ

Antibody molecule is made up of four peptide chain called as light and heavy chain are joined together by :

- (1) Peptide bond
- (2) Phospho diester bond
- (3) Glycosidic bond
- (4) Disulfide bond

Options :

54025064157. 1

54025064158. 2

54025064159. 3

54025064160. 4

Question Number : 70 Question Id : 54025016040 Question Type : MCQ Option Shuffling : No**Is Question Mandatory : No Calculator : None Response Time : N.A Think Time : N.A****Minimum Instruction Time : 0****Correct Marks : 5 Wrong Marks : 1****Question Key Details :**

Key	Value
Comprehension	MCQ

प्रतिरक्षियों के अणु चार पेप्टाइड श्रृंखलाओं से मिलाकर बने हैं जो हल्के हैं आपस में मिलकर भारी श्रृंखला बनाते हैं :

- (1) पेप्टाइड बंध
- (2) फॉस्फोडॉयस्टर बंध
- (3) ग्लायकोसिडिक बंध
- (4) डाईसल्फाइड बंध

Options :

54025064157. 1

54025064158. 2

54025064159. 3

54025064160. 4

Question Number : 71 Question Id : 54025016041 Question Type : MCQ Option Shuffling : No**Is Question Mandatory : No Calculator : None Response Time : N.A Think Time : N.A****Minimum Instruction Time : 0****Correct Marks : 5 Wrong Marks : 1****Question Key Details :**

Key	Value
Comprehension	MCQ

Match List - I with List - II.

List - I

List - II

- | | |
|-----------------|----------------------|
| (A) Wheat | (I) Pusa shubhra |
| (B) Cauliflower | (II) Himgiri |
| (C) Cowpea | (III) Pusa sadabahar |
| (D) Chilli | (IV) Pusa komal |

Choose the **correct** answer from the options given below :

- (1) (A)-(I), (B)-(III), (C)-(II), (D)-(IV)
- (2) (A)-(II), (B)-(III), (C)-(IV), (D)-(I)
- (3) (A)-(III), (B)-(IV), (C)-(II), (D)-(I)
- (4) (A)-(II), (B)-(I), (C)-(IV), (D)-(III)

Options :

54025064161. 1

54025064162. 2

54025064163. 3

54025064164. 4

Question Number : 71 Question Id : 54025016041 Question Type : MCQ Option Shuffling : No

Is Question Mandatory : No Calculator : None Response Time : N.A Think Time : N.A

Minimum Instruction Time : 0

Correct Marks : 5 Wrong Marks : 1

Question Key Details :

Key	Value
Comprehension	MCQ

सूची - I का सूची - II से मिलान करें।

सूची - I

सूची - II

- | | |
|------------|--------------------|
| (A) गेहू | (I) पूसा शुभ्रा |
| (B) गोभी | (II) हिमगिरि |
| (C) लोबिया | (III) पूसा सदाबहार |
| (D) मिर्च | (IV) पूसा कोमल |

निम्नलिखित विकल्पों में से सही उत्तर का चयन कीजिए :

- (1) (A)-(I), (B)-(III), (C)-(II), (D)-(IV)
- (2) (A)-(II), (B)-(III), (C)-(IV), (D)-(I)
- (3) (A)-(III), (B)-(IV), (C)-(II), (D)-(I)
- (4) (A)-(II), (B)-(I), (C)-(IV), (D)-(III)

Options :

54025064161. 1

54025064162. 2

54025064163. 3

54025064164. 4

Question Number : 72 Question Id : 54025016042 Question Type : MCQ Option Shuffling : No

Is Question Mandatory : No Calculator : None Response Time : N.A Think Time : N.A

Minimum Instruction Time : 0

Correct Marks : 5 Wrong Marks : 1

Question Key Details :

Key	Value
Comprehension	MCQ

Which of the following is a wheat variety having high protein content ?

- (1) Sonalika
- (2) Atlas-66
- (3) Jaya
- (4) Ratna

Options :

54025064165. 1

54025064166. 2

54025064167. 3

54025064168. 4

Question Number : 72 Question Id : 54025016042 Question Type : MCQ Option Shuffling : No**Is Question Mandatory : No Calculator : None Response Time : N.A Think Time : N.A****Minimum Instruction Time : 0****Correct Marks : 5 Wrong Marks : 1****Question Key Details :**

Key	Value
Comprehension	MCQ

निम्नलिखित में से कौन सी गेहू की प्रजाती में प्रोटीन प्रचुर मात्रा में है ?

- (1) सोनालिका
- (2) ऐटलस-66
- (3) जया
- (4) रत्ना

Options :

54025064165. 1

54025064166. 2

54025064167. 3

54025064168. 4

Question Number : 73 Question Id : 54025016043 Question Type : MCQ Option Shuffling : No**Is Question Mandatory : No Calculator : None Response Time : N.A Think Time : N.A****Minimum Instruction Time : 0****Correct Marks : 5 Wrong Marks : 1****Question Key Details :**

Key	Value
Comprehension	MCQ

In mung bean, resistance to yellow mosaic virus and powdery mildew were induced by :

- (1) Hybridisation
- (2) Recombination
- (3) Micropropagation
- (4) Mutation

Options :

54025064169. 1

54025064170. 2

54025064171. 3

54025064172. 4

Question Number : 73 Question Id : 54025016043 Question Type : MCQ Option Shuffling : No

Is Question Mandatory : No Calculator : None Response Time : N.A Think Time : N.A

Minimum Instruction Time : 0

Correct Marks : 5 Wrong Marks : 1

Question Key Details :

Key	Value
Comprehension	MCQ

मूंग बीन को, पीत मोजेईक विषाणु तथा पाउडरी मिल्ड्यू से प्रतिरोधी बनाने के लिए प्रेरित किया जाता है :

- (1) संकरीकरण
- (2) पुनसंयोजन
- (3) सक्षमप्रवर्धन
- (4) उत्परिवर्तन

Options :

54025064169. 1

54025064170. 2

54025064171. 3

54025064172. 4

Question Number : 74 Question Id : 54025016044 Question Type : MCQ Option Shuffling : No
Is Question Mandatory : No Calculator : None Response Time : N.A Think Time : N.A
Minimum Instruction Time : 0

Correct Marks : 5 Wrong Marks : 1

Question Key Details :

Key	Value
Comprehension	MCQ

Match List - I with List - II.

List - I

- (A) *Aspergillus niger*
- (B) *Trichoderma polysporum*
- (C) *Lactobacillus*
- (D) *Saccharomyces cerevisiae*

List - II

- (I) Cyclosporin - A
- (II) Ethanol
- (III) Citric acid
- (IV) Lactic acid

Choose the **correct** answer from the options given below :

- (1) (A)-(III), (B)-(II), (C)-(I), (D)-(IV)
- (2) (A)-(I), (B)-(II), (C)-(IV), (D)-(III)
- (3) (A)-(I), (B)-(IV), (C)-(II), (D)-(III)
- (4) (A)-(III), (B)-(I), (C)-(IV), (D)-(II)

Options :

54025064173. 1

54025064174. 2

54025064175. 3

54025064176. 4

Question Number : 74 Question Id : 54025016044 Question Type : MCQ Option Shuffling : No
Is Question Mandatory : No Calculator : None Response Time : N.A Think Time : N.A
Minimum Instruction Time : 0

Correct Marks : 5 Wrong Marks : 1

Question Key Details :

Key	Value
-----	-------

सूची - I का सूची - II से मिलान करें।

सूची - I

सूची - II

(A) एस्पेरजिलस निजर

(I) साइक्लोस्पोरिन - A

(B) ट्राइफोडर्मा पॉलीस्पोरम

(II) ऐथेनॉल

(C) लैक्टोबेसिलस

(III) सिट्रिक अम्ल

(D) सैकरोमाइसीज सरविसी

(IV) लैक्टिक अम्ल

निम्नलिखित विकल्पों में से सही उत्तर का चयन कीजिए :

(1) (A)-(III), (B)-(II), (C)-(I), (D)-(IV)

(2) (A)-(I), (B)-(II), (C)-(IV), (D)-(III)

(3) (A)-(I), (B)-(IV), (C)-(II), (D)-(III)

(4) (A)-(III), (B)-(I), (C)-(IV), (D)-(II)

Options :

54025064173. 1

54025064174. 2

54025064175. 3

54025064176. 4

Question Number : 75 Question Id : 54025016045 Question Type : MCQ Option Shuffling : No

Is Question Mandatory : No Calculator : None Response Time : N.A Think Time : N.A

Minimum Instruction Time : 0

Correct Marks : 5 Wrong Marks : 1

Question Key Details :

Key	Value
Comprehension	MCQ

Which of the following acts as bio fertilizer in paddy field ?

- (1) *Nostoc*
- (2) *Rhizobium*
- (3) *Azospirillum*
- (4) *Azotobacter*

Options :

54025064177. 1

54025064178. 2

54025064179. 3

54025064180. 4

Question Number : 75 Question Id : 54025016045 Question Type : MCQ Option Shuffling : No

Is Question Mandatory : No Calculator : None Response Time : N.A Think Time : N.A

Minimum Instruction Time : 0

Correct Marks : 5 Wrong Marks : 1

Question Key Details :

Key	Value
Comprehension	MCQ

निम्नलिखित विकल्पों में से एक धान की खेती में जैव खाद का कार्य करते हैं?

- (1) नॉस्टोक
- (2) राईजोबियम
- (3) ऐजोस्परिलम
- (4) ऐजोटोबैक्टर

Options :

54025064177. 1

54025064178. 2

54025064179. 3

54025064180. 4

Question Number : 76 Question Id : 54025016046 Question Type : MCQ (



collegedunia

Is Question Mandatory : No Calculator : None Response Time : N.A Think Time : N.A

Minimum Instruction Time : 0

Correct Marks : 5 Wrong Marks : 1

Question Key Details :

Key	Value
Comprehension	MCQ

The puffed-up appearance of dough is due to the production of :

- (1) Carbon dioxide gas
- (2) Alcohol
- (3) Acetic acid
- (4) Oxygen gas

Options :

54025064181. 1

54025064182. 2

54025064183. 3

54025064184. 4

Question Number : 76 Question Id : 54025016046 Question Type : MCQ Option Shuffling : No

Is Question Mandatory : No Calculator : None Response Time : N.A Think Time : N.A

Minimum Instruction Time : 0

Correct Marks : 5 Wrong Marks : 1

Question Key Details :

Key	Value
Comprehension	MCQ

गुदाहुआ आटा, एक के उत्पादन के कारण फूलाउभरा प्रतित होता है ?

- (1) कार्बन डाई ऑक्साईड गैस
- (2) ऐल्कोहल
- (3) ऐसिटिक अम्ल
- (4) ऑक्सीजन गैस

Options :

54025064181. 1

54025064182. 2

54025064183. 3

54025064184. 4

Question Number : 77 Question Id : 54025016047 Question Type : MCQ Option Shuffling : No

Is Question Mandatory : No Calculator : None Response Time : N.A Think Time : N.A

Minimum Instruction Time : 0

Correct Marks : 5 Wrong Marks : 1

Question Key Details :

Key	Value
Comprehension	MCQ

Arrange the following steps of gel electrophoresis in correct sequence :

- (A) Staining the DNA with ethidium bromide
- (B) Movement of DNA fragments towards anode under an electric field through agarose
- (C) Exposure to UV radiation
- (D) Separation of DNA fragments according to their size

Choose the **correct** answer from the options given below :

- (1) (B), (D), (A), (C)
- (2) (C), (A), (D), (B)
- (3) (B), (A), (C), (D)
- (4) (A), (D), (B), (C)

Options :

54025064185. 1

54025064186. 2

54025064187. 3

54025064188. 4

Question Number : 77 Question Id : 54025016047 Question Type : MCQ Option Shuffling : No

Is Question Mandatory : No Calculator : None Response Time : N.A Thin

Minimum Instruction Time : 0

Correct Marks : 5 Wrong Marks : 1

Question Key Details :

Key	Value
Comprehension	MCQ

जैल इलेक्ट्रोफोरेसिस के निम्नलिखित पदों को सही क्रमबद्ध करें :

- (A) DNA को ऐथीडियम ब्रोमाइड से अमिरजित करना
- (B) DNA सूत्र का ऐग्रोज की उपस्थिति में विद्युतक्षेत्र में ऐनोड की ओर गमन
- (C) पराबैंगनी विकिरण से सम्पर्क
- (D) डी.एन.ए. गुण सूत्रका उसके आकार के अनुसार प्रथक्करण

निम्नलिखित विकल्पों में से सही उत्तर का चयन कीजिए :

- (1) (B), (D), (A), (C)
- (2) (C), (A), (D), (B)
- (3) (B), (A), (C), (D)
- (4) (A), (D), (B), (C)

Options :

54025064185. 1

54025064186. 2

54025064187. 3

54025064188. 4

Question Number : 78 Question Id : 54025016048 Question Type : MCQ Option Shuffling : No

Is Question Mandatory : No Calculator : None Response Time : N.A Think Time : N.A

Minimum Instruction Time : 0

Correct Marks : 5 Wrong Marks : 1

Question Key Details :

Key	Value
Comprehension	MCQ

If a scientist wants to recover many copies of the target DNA through recombinant DNA technology, what augmentation need to be done in cloning vector ?

- (1) Reduce cloning sites
- (2) add origin of reparation (ori) that support high copy number
- (3) add more selectable maker
- (4) add more cloning sites

Options :

54025064189. 1

54025064190. 2

54025064191. 3

54025064192. 4

Question Number : 78 Question Id : 54025016048 Question Type : MCQ Option Shuffling : No

Is Question Mandatory : No Calculator : None Response Time : N.A Think Time : N.A

Minimum Instruction Time : 0

Correct Marks : 5 Wrong Marks : 1

Question Key Details :

Key	Value
Comprehension	MCQ

एक वैज्ञानिक DNA को केन्द्र में रखकर पुनर्योजन डी.एन.ए. तकनीक द्वारा अनेक प्रतिलिपिया प्राप्त करना चाहता है, उसे क्लोनिंग के लिए क्या संवर्धन करना चाहिए :

- (1) क्लोनिंग स्तल में कमी
- (2) अधिक प्रतिलिपि करने वाली रिपेरेशन (ओरी) को जोड़ना चाहिए।
- (3) अधिक वरणात्मक बनाना चाहिए
- (4) अधिक क्लोनिंग स्थलों को जोड़ना चाहिए

Options :

54025064189. 1

54025064190. 2

54025064191. 3

54025064192. 4

**Question Number : 79 Question Id : 54025016049 Question Type : MCQ Option Shuffling : No
Is Question Mandatory : No Calculator : None Response Time : N.A Think Time : N.A
Minimum Instruction Time : 0**

Correct Marks : 5 Wrong Marks : 1

Question Key Details :

Key	Value
Comprehension	MCQ

The cell wall of a bacteria can be removed by treated it with enzyme :

- (1) Lysozyme
- (2) Cellulase
- (3) Chitinase
- (4) Pectinase

Options :

54025064193. 1

54025064194. 2

54025064195. 3

54025064196. 4

**Question Number : 79 Question Id : 54025016049 Question Type : MCQ Option Shuffling : No
Is Question Mandatory : No Calculator : None Response Time : N.A Think Time : N.A
Minimum Instruction Time : 0**

Correct Marks : 5 Wrong Marks : 1

Question Key Details :

Key	Value
Comprehension	MCQ

जीवाणु की कोशिका भित्ति को एंजाइम की अभिक्रिया से निकाला जा सकता है :

- (1) लाईसोजाइम
- (2) सैलूलोज
- (3) कार्टिनेज
- (4) पेक्टिनेज

Options :

54025064193. 1

54025064194. 2

54025064195. 3

54025064196. 4

Question Number : 80 Question Id : 54025016050 Question Type : MCQ Option Shuffling : No

Is Question Mandatory : No Calculator : None Response Time : N.A Think Time : N.A

Minimum Instruction Time : 0

Correct Marks : 5 Wrong Marks : 1

Question Key Details :

Key	Value
Comprehension	MCQ

The gene encoding resistance to which antibiotic are considered useful selectable marker for *E. coli*.

- (A) ampicillin
- (B) tetracycline
- (C) kanamycin
- (D) penicillin
- (E) chloramphenicol

Choose the correct answer from the options given below :

- (1) (A) and (D) only
- (2) (B) and (C) only
- (3) (C) and (D) only
- (4) (A), (B), (C) and (E) only

Options :

54025064197. 1

54025064198. 2

54025064199. 3

54025064200. 4

Question Number : 80 Question Id : 54025016050 Question Type : MCQ Option Shuffling : No**Is Question Mandatory : No Calculator : None Response Time : N.A Think Time : N.A****Minimum Instruction Time : 0****Correct Marks : 5 Wrong Marks : 1****Question Key Details :**

Key	Value
Comprehension	MCQ

विशेष E. coli की जीन कोडिंग के, प्रतिरोध के लिए किस प्रतिजैवी का उपयोग उचित है :

- (A) ऐम्पिसिलिन
- (B) टेट्रासाइक्लिन
- (C) केनामायसिन
- (D) पेनिसिलिन
- (E) क्लोरामफेनिकॉल

निम्नलिखित विकल्पों में से सही उत्तर का चयन कीजिए :

- (1) केवल (A) केवल (D)
- (2) केवल (B) केवल (C)
- (3) केवल (C) केवल (D)
- (4) केवल (A), (B), (C) केवल (E)

Options :

54025064197. 1

54025064198. 2

54025064199. 3

54025064200. 4

Question Number : 81 Question Id : 54025016051 Question Type : MCQ Option Shuffling : No

Is Question Mandatory : No Calculator : None Response Time : N.A Think Time : N.A

Minimum Instruction Time : 0

Correct Marks : 5 Wrong Marks : 1

Question Key Details :

Key	Value
Comprehension	MCQ

Toxin of *Bacillus thurengiensis* is activated in insect by :

- (1) Alkaline pH of gut
- (2) Acidic pH of gut
- (3) High temperature
- (4) Mechanical action of gut

Options :

54025064201. 1

54025064202. 2

54025064203. 3

54025064204. 4

Question Number : 81 Question Id : 54025016051 Question Type : MCQ Option Shuffling : No

Is Question Mandatory : No Calculator : None Response Time : N.A Think Time : N.A

Minimum Instruction Time : 0

Correct Marks : 5 Wrong Marks : 1

Question Key Details :

Key	Value
Comprehension	MCQ

बेसिलस थुरेंजेसिस का आविबालु किस कीट द्वारा सक्रिया होता है?

- (1) आहारनलीके क्षारीय pH मान पर
- (2) आहारनली के आम्लीय pH मान पर
- (3) अधिक तापक्रम पर
- (4) आहार नली की यांत्रिक क्रियापर

Options :

54025064201. 1

54025064202. 2

54025064203. 3

54025064204. 4

Question Number : 82 Question Id : 54025016052 Question Type : MCQ Option Shuffling : No

Is Question Mandatory : No Calculator : None Response Time : N.A Think Time : N.A

Minimum Instruction Time : 0

Correct Marks : 5 Wrong Marks : 1

Question Key Details :

Key	Value
Comprehension	MCQ

In RNAi genes are silenced by :

- (1) ss RNA
- (2) ss DNA
- (3) ds RNA
- (4) ds DNA

Options :

54025064205. 1

54025064206. 2

54025064207. 3

54025064208. 4

Question Number : 82 Question Id : 54025016052 Question Type : MCQ (

Is Question Mandatory : No Calculator : None Response Time : N.A Think Time : N.A

Minimum Instruction Time : 0

Correct Marks : 5 Wrong Marks : 1

Question Key Details :

Key	Value
Comprehension	MCQ

RNAi जीन को मौन किया जाता है :

- (1) ss RNA द्वारा
- (2) ss DNA द्वारा
- (3) ds RNA द्वारा
- (4) ds DNA द्वारा

Options :

54025064205. 1

54025064206. 2

54025064207. 3

54025064208. 4

Question Number : 83 Question Id : 54025016053 Question Type : MCQ Option Shuffling : No

Is Question Mandatory : No Calculator : None Response Time : N.A Think Time : N.A

Minimum Instruction Time : 0

Correct Marks : 5 Wrong Marks : 1

Question Key Details :

Key	Value
Comprehension	MCQ

Match List - I with List - II.

List - I

- (A) Cuckoo lays egg in crow's nest
- (B) Orchid grows in mango tree
- (C) Ticks live on skin of dogs
- (D) Species of Wasp and fig species

List - II

- (I) Commensalism
- (II) Parasitism
- (III) Mutualism
- (IV) Brood parasitism

Choose the **correct** answer from the options given below :

- (1) (A)-(I), (B)-(IV), (C)-(II), (D)-(III)
- (2) (A)-(IV), (B)-(I), (C)-(II), (D)-(III)
- (3) (A)-(IV), (B)-(I), (C)-(III), (D)-(II)
- (4) (A)-(I), (B)-(II), (C)-(III), (D)-(IV)

Options :

54025064209. 1

54025064210. 2

54025064211. 3

54025064212. 4

Question Number : 83 Question Id : 54025016053 Question Type : MCQ Option Shuffling : No

Is Question Mandatory : No Calculator : None Response Time : N.A Think Time : N.A

Minimum Instruction Time : 0

Correct Marks : 5 Wrong Marks : 1

Question Key Details :

Key	Value
Comprehension	MCQ

सारणी - I का सारणी - II से मिलान करें।

सारणी - I

- (A) कोयल अपने अंडे कौआ के घोंसले में देती है
- (B) ऑर्किड आम के पेड़ पर उगता है
- (C) कुटे की कुत्ता की त्वचा में रहता है
- (D) बर से अंजीर के पुष्प में परागण होता है

सारणी - II

- (I) सहभोजता
- (II) परजीविता
- (III) सहोपकारिता
- (IV) अंड परजीविता

निम्नलिखित विकल्पों में से **सही** उत्तर का चयन कीजिए :

- (1) (A)-(I), (B)-(IV), (C)-(II), (D)-(III)
- (2) (A)-(IV), (B)-(I), (C)-(II), (D)-(III)
- (3) (A)-(IV), (B)-(I), (C)-(III), (D)-(II)
- (4) (A)-(I), (B)-(II), (C)-(III), (D)-(IV)

Options :

54025064209. 1

54025064210. 2

54025064211. 3

54025064212. 4

Question Number : 84 Question Id : 54025016054 Question Type : MCQ Option Shuffling : No

Is Question Mandatory : No Calculator : None Response Time : N.A Think Time : N.A

Minimum Instruction Time : 0

Correct Marks : 5 Wrong Marks : 1

Question Key Details :

Key	Value
Comprehension	MCQ

Verhulst pearl logistic population growth is represented by the equation :

$$(1) \quad \frac{dt}{dN} = rN \left(\frac{K - N}{K} \right)$$

$$(2) \quad \frac{dN}{dt} = rN \left(\frac{K}{K - N} \right)$$

$$(3) \quad \frac{dN}{dt} = rN \left(\frac{K - N}{K} \right)$$

$$(4) \quad \frac{dt}{dN} = rN \left(\frac{K}{K - N} \right)$$

Options :

54025064213. 1

54025064214. 2

54025064215. 3

54025064216. 4

Question Number : 84 Question Id : 54025016054 Question Type : MCQ Option Shuffling : No

Is Question Mandatory : No Calculator : None Response Time : N.A Think Time : N.A

Minimum Instruction Time : 0

Correct Marks : 5 Wrong Marks : 1

Question Key Details :

Key	Value
Comprehension	MCQ

वेरहुस्ट-पर्ल तार्किक जनसंख्या वृद्धि, समीकरण द्वारा प्रदर्शित की जाती है :

$$(1) \quad \frac{dt}{dN} = rN \left(\frac{K - N}{K} \right)$$

$$(2) \quad \frac{dN}{dt} = rN \left(\frac{K}{K - N} \right)$$

$$(3) \quad \frac{dN}{dt} = rN \left(\frac{K - N}{K} \right)$$

$$(4) \quad \frac{dt}{dN} = rN \left(\frac{K}{K - N} \right)$$

Options :

54025064213. 1

54025064214. 2

54025064215. 3

54025064216. 4

Question Number : 85 Question Id : 54025016055 Question Type : MCQ Option Shuffling : No

Is Question Mandatory : No Calculator : None Response Time : N.A Think Time : N.A

Minimum Instruction Time : 0

Correct Marks : 5 Wrong Marks : 1

Question Key Details :

Key	Value
Comprehension	MCQ

The rate of decomposition is slower if :

- (1) Availability of large amount of oxygen
- (2) Warm and moist environment
- (3) The detritus is rich in nitrogen and sugars
- (4) The detritus is rich is lignin and chitin

Options :

54025064217. 1

54025064218. 2

54025064219. 3

54025064220. 4

Question Number : 85 Question Id : 54025016055 Question Type : MCQ Option Shuffling : No

Is Question Mandatory : No Calculator : None Response Time : N.A Think Time : N.A

Minimum Instruction Time : 0

Correct Marks : 5 Wrong Marks : 1

Question Key Details :

Key	Value
Comprehension	MCQ

विघटन की गति घीमी हो जाती है यदि :

- (1) अधिक मात्रा में आँक्सीजन की उपलब्धता हो
- (2) गर्म तथा नमीयुक्त वातावरण हो
- (3) अपरद, नाइट्रोजन तथा अर्करायुक्त प्रचुर मात्रा में हो
- (4) अपरद, में लिग्निन तथा कार्बोनिटिन प्रचुर मात्रा में हो

Options :

54025064217. 1

54025064218. 2

54025064219. 3

54025064220. 4

Question Number : 86 Question Id : 54025016056 Question Type : MCQ Option Shuffling : No

Is Question Mandatory : No Calculator : None Response Time : N.A Think Time : N.A

Minimum Instruction Time : 0

Correct Marks : 5 Wrong Marks : 1

Question Key Details :

Key	Value
Comprehension	MCQ

An example of inverted ecological pyramid is :

- (1) Pyramid of energy of forest
- (2) Pyramid of energy of grassland
- (3) Pyramid of biomass of sea
- (4) Pyramid of number in a grassland

Options :

54025064221. 1

54025064222. 2

54025064223. 3

54025064224. 4

Question Number : 86 Question Id : 54025016056 Question Type : MCQ Option Shuffling : No

Is Question Mandatory : No Calculator : None Response Time : N.A Think Time : N.A

Minimum Instruction Time : 0

Correct Marks : 5 Wrong Marks : 1

Question Key Details :

Key	Value
Comprehension	MCQ

उल्टे पारिस्थितिक पिरामिड का उदाहरण है :

- (1) वन की ऊर्जा वाला पिरामिड
- (2) घास के मैदान की ऊर्जा वाला पिरामिड
- (3) समुद्र के जैव मास की ऊर्जा वाला पिरामिड
- (4) घास के मैदान वाली ऊर्जा वाला पिरामिड

Options :

54025064221. 1

54025064222. 2

54025064223. 3

54025064224. 4

Question Number : 87 Question Id : 54025016057 Question Type : MCQ (

Is Question Mandatory : No Calculator : None Response Time : N.A Think Time : N.A

Minimum Instruction Time : 0

Correct Marks : 5 Wrong Marks : 1

Question Key Details :

Key	Value
Comprehension	MCQ

Who popularised the term 'Biodiversity' that intends to describe the combined diversity at all the levels of biological organisation ?

- (1) Devid Harvery
- (2) Sengar and Nicolson
- (3) Edward Wilson
- (4) Edward Jenar

Options :

54025064225. 1

54025064226. 2

54025064227. 3

54025064228. 4

Question Number : 87 Question Id : 54025016057 Question Type : MCQ Option Shuffling : No

Is Question Mandatory : No Calculator : None Response Time : N.A Think Time : N.A

Minimum Instruction Time : 0

Correct Marks : 5 Wrong Marks : 1

Question Key Details :

Key	Value
Comprehension	MCQ

जिसने जैव विविधता के पद को व्यापक किया, उसकी प्रवृत्ति संयुक्त विविधता को संयुक्त रूप से जैविक संगठन स्तर तक व्यापक करने की थी, वह :

- (1) डेविड हार्वे
- (2) सेंगार और निकोलसन
- (3) ऐडवर्ड विल्सन
- (4) ऐडवर्ड जैनर

Options :

54025064225. 1

54025064226. 2

54025064227. 3

54025064228. 4

Question Number : 88 Question Id : 54025016058 Question Type : MCQ Option Shuffling : No

Is Question Mandatory : No Calculator : None Response Time : N.A Think Time : N.A

Minimum Instruction Time : 0

Correct Marks : 5 Wrong Marks : 1

Question Key Details :

Key	Value
Comprehension	MCQ

Which of the following is **not** an In situ conservation approach ?

- (1) Biosphere reserves
- (2) National parks
- (3) Cryopreservation
- (4) Sacred groves

Options :

54025064229. 1

54025064230. 2

54025064231. 3

54025064232. 4

Question Number : 88 Question Id : 54025016058 Question Type : MCQ Option Shuffling : No

Is Question Mandatory : No Calculator : None Response Time : N.A Think Time : N.A

Minimum Instruction Time : 0

Correct Marks : 5 Wrong Marks : 1

Question Key Details :

Key	Value
Comprehension	MCQ

निम्नलिखित में कौन सा संरक्षण उपगमन एक स्वस्थान नहीं है ?

- (1) जैविक क्षेत्र
- (2) राष्ट्रीय उद्यान
- (3) निम्न तापीय संरक्षण
- (4) पवित्र उपवन

Options :

54025064229. 1

54025064230. 2

54025064231. 3

54025064232. 4

Question Number : 89 Question Id : 54025016059 Question Type : MCQ Option Shuffling : No

Is Question Mandatory : No Calculator : None Response Time : N.A Think Time : N.A

Minimum Instruction Time : 0

Correct Marks : 5 Wrong Marks : 1

Question Key Details :

Key	Value
Comprehension	MCQ

In the following which plant is also called 'Terror of Bengal' ?

- (1) *Parthenium*
- (2) *Eichhornia*
- (3) *Lantana*
- (4) *Vallisneria*

Options :

54025064233. 1

54025064234. 2

54025064235. 3

54025064236. 4

Question Number : 89 Question Id : 54025016059 Question Type : MCQ Option Shuffling : No**Is Question Mandatory : No Calculator : None Response Time : N.A Think Time : N.A****Minimum Instruction Time : 0****Correct Marks : 5 Wrong Marks : 1****Question Key Details :**

Key	Value
Comprehension	MCQ

निम्नलिखित में से कौन सा पादप, बंगाल का आतंक है?

- (1) पार्थीनियम
- (2) ईकोर्निया
- (3) लैन्टाना
- (4) वैलिसनेरिया

Options :

54025064233. 1

54025064234. 2

54025064235. 3

54025064236. 4

Question Number : 90 Question Id : 54025016060 Question Type : MCQ Option Shuffling : No**Is Question Mandatory : No Calculator : None Response Time : N.A Think Time : N.A****Minimum Instruction Time : 0****Correct Marks : 5 Wrong Marks : 1****Question Key Details :**

Key	Value
Comprehension	MCQ

Scrubber technology used in automobile to remove mainly which harmful gas from the exhaust with the help of water spray or lime :

- (1) Sulphur dioxide
- (2) Selenium dioxide
- (3) Phosphorus penta oxide
- (4) Carbon dioxide

Options :

54025064237. 1

54025064238. 2

54025064239. 3

54025064240. 4

Question Number : 90 Question Id : 54025016060 Question Type : MCQ Option Shuffling : No

Is Question Mandatory : No Calculator : None Response Time : N.A Think Time : N.A

Minimum Instruction Time : 0

Correct Marks : 5 Wrong Marks : 1

Question Key Details :

Key	Value
Comprehension	MCQ

स्क्रबर तकनीक को स्वचालित वाहनों में विशेष रूप से हानिकारक गैसों को निष्कासित करने के लिए जल की फुहार या बौछार की जाती है :

- (1) सल्फर डाई ऑक्साइड
- (2) सेलीनियम डाई ऑक्साइड
- (3) फॉस्फोरस पेन्टा ऑक्साइड
- (4) कार्बन डाई ऑक्साइड

Options :

54025064237. 1

54025064238. 2

54025064239. 3

54025064240. 4

Sub-Section Number : 2
Sub-Section Id : 5402501139
Question Shuffling Allowed : No
Is Section Default? : null

Question Number : 91 Question Id : 54025016061 Question Type : MCQ Option Shuffling : No

Is Question Mandatory : No Calculator : None Response Time : N.A Think Time : N.A

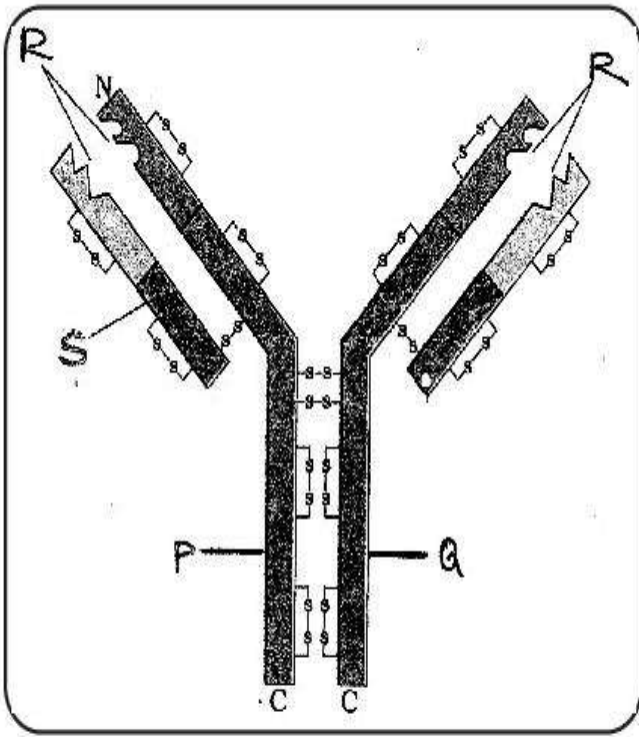
Minimum Instruction Time : 0

Correct Marks : 5 Wrong Marks : 1

Question Key Details :

Key	Value
Comprehension	Comp1

Observe the diagram and answer the following question.



Which among the following cell produce the molecule shown in figure ?

- (1) Active body cell
- (2) T - lymphocytes
- (3) B - lymphocytes
- (4) Both B and T lymphocytes

Options :

54025064241. 1

54025064242. 2

54025064243. 3

54025064244. 4

Question Number : 91 Question Id : 54025016061 Question Type : MCQ Option Shuffling : No

Is Question Mandatory : No Calculator : None Response Time : N.A Think Time : N.A

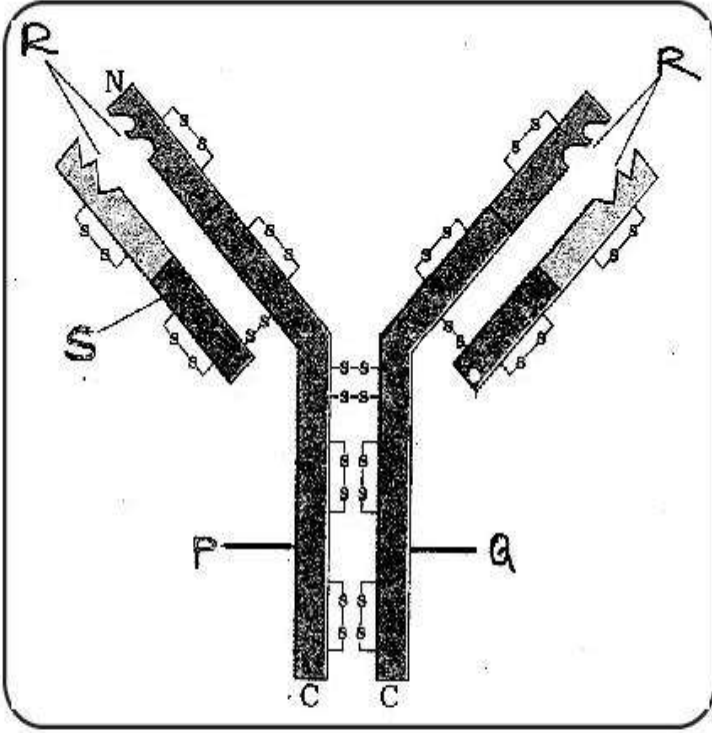
Minimum Instruction Time : 0

Correct Marks : 5 Wrong Marks : 1

Question Key Details :

Key	Value
Comprehension	Comp1

आरेख का अवलोकन करके निम्नलिखित प्रश्न का उत्तर दीजिए।



आरेख में दिए गए अणुओं में से, निम्नलिखित में कौन कोशिका उत्पन्न करता है?

- (1) सक्रिय शरीर कोशिका
- (2) T - कोशिका
- (3) B - कोशिका
- (4) दोनों B तथा T कोशिका

Options :

54025064241. 1

54025064242. 2

54025064243. 3

54025064244. 4

Question Number : 92 Question Id : 54025016062 Question Type : MCQ Option Shuffling : No

Is Question Mandatory : No Calculator : None Response Time : N.A Think Time : N.A

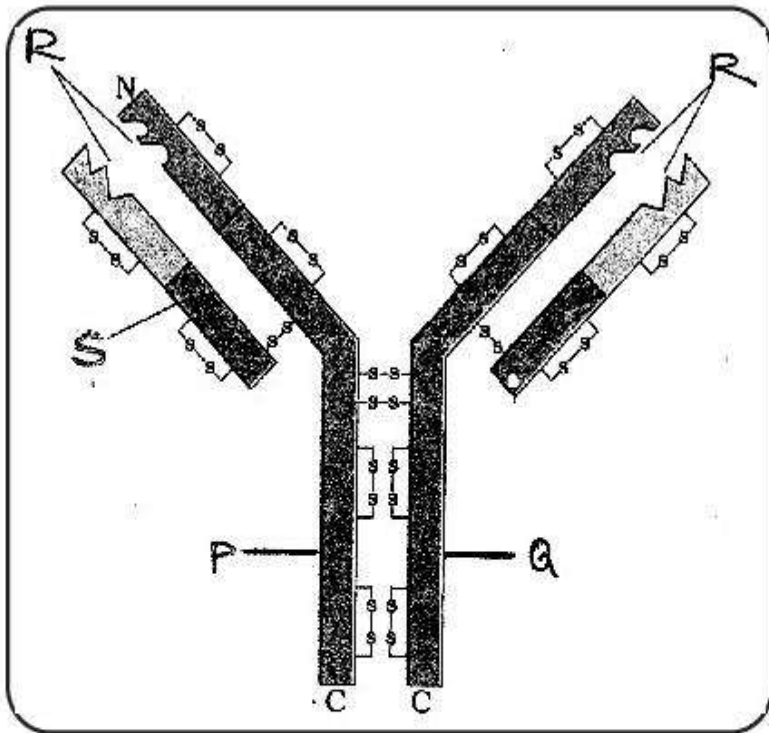
Minimum Instruction Time : 0

Correct Marks : 5 Wrong Marks : 1

Question Key Details :

Key	Value
-----	-------

Observe the diagram and answer the following question.



The parts 'P' and 'Q' of the molecule are held by.

- (1) Covalent bonds
- (2) Ionic bonds
- (3) Phospho diester bonds
- (4) Disulphide bonds

Options :

54025064245. 1

54025064246. 2

54025064247. 3

54025064248. 4

Question Number : 92 Question Id : 54025016062 Question Type : MCQ Option Shuffling : No

Is Question Mandatory : No Calculator : None Response Time : N.A Think Time : N.A

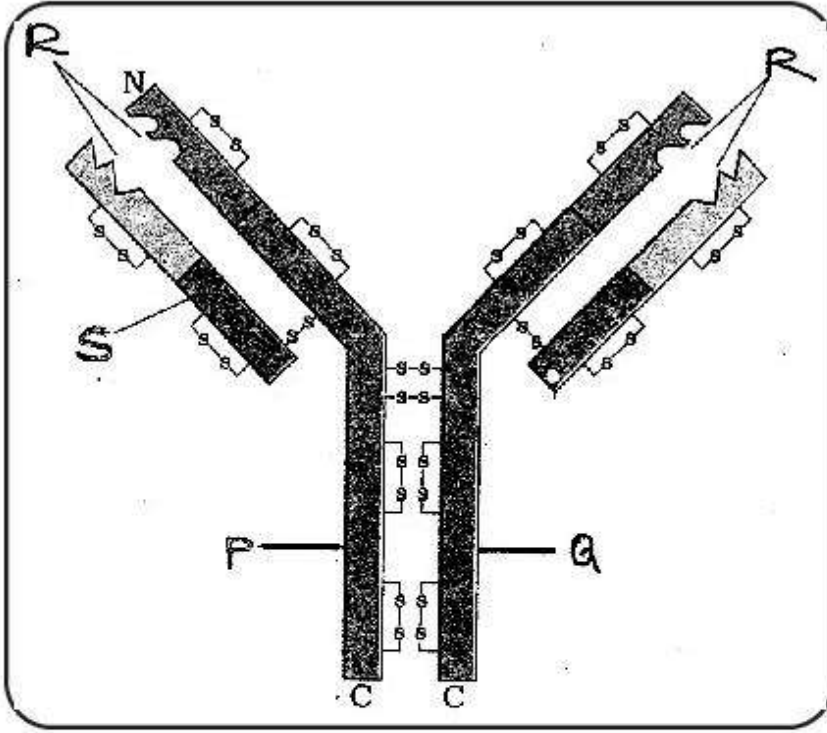
Minimum Instruction Time : 0

Correct Marks : 5 Wrong Marks : 1

Question Key Details :

Key	Value
-----	-------

आरेख का अवलोकन करके निम्नलिखित प्रश्न का उत्तर दीजिए।



'P' और 'Q' बंधे होते हैं :

- (1) सहसंयोजक बंध द्वारा
- (2) आयनिक बंध द्वारा
- (3) फॉस्फो डायस्टर बंध द्वारा
- (4) डाई सल्फाइड बंध द्वारा

Options :

54025064245. 1

54025064246. 2

54025064247. 3

54025064248. 4

Question Number : 93 Question Id : 54025016063 Question Type : MCQ Option Shuffling : No

Is Question Mandatory : No Calculator : None Response Time : N.A Think Time : N.A

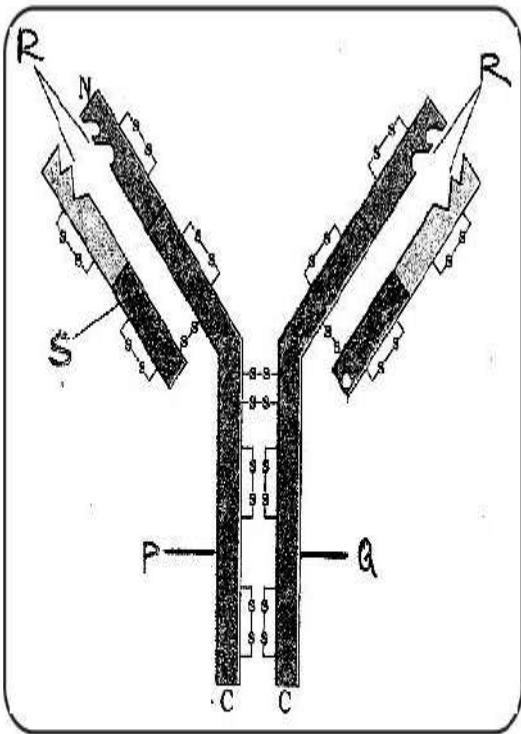
Minimum Instruction Time : 0

Correct Marks : 5 Wrong Marks : 1

Question Key Details :

Key	Value
Comprehension	Comp1

Observe the diagram and answer the following question.



The cell which help/stimulate other cell in producing the molecule shown in diagram is :

- (1) B - lymphocytes
- (2) T - lymphocytes
- (3) Neutrophils
- (4) Macrophages

Options :

54025064249. 1

54025064250. 2

54025064251. 3

54025064252. 4

Question Number : 93 Question Id : 54025016063 Question Type : MCQ Option Shuffling : No

Is Question Mandatory : No Calculator : None Response Time : N.A Think Time : N.A

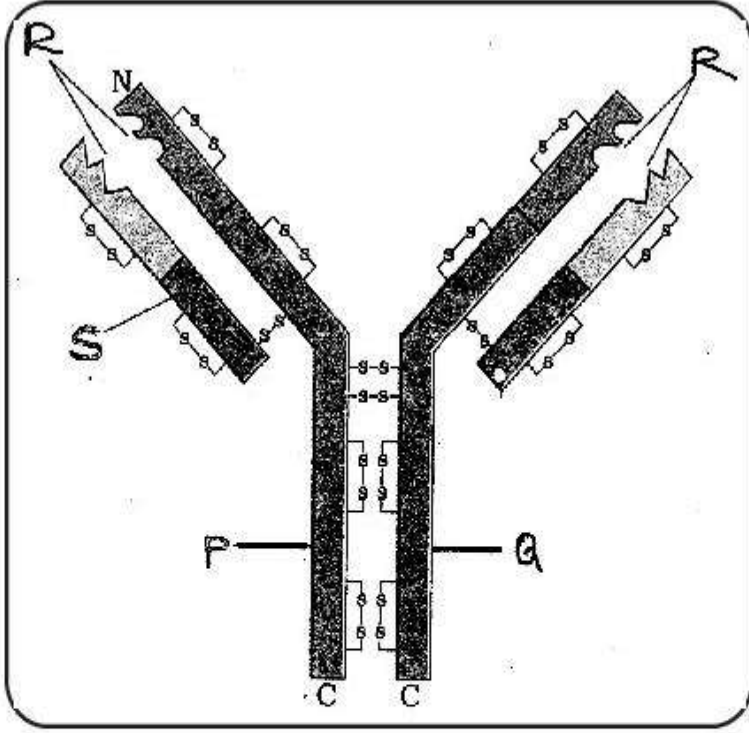
Minimum Instruction Time : 0

Correct Marks : 5 Wrong Marks : 1

Question Key Details :

Key	Value
Comprehension	Comp1

आरेख का अवलोकन करके निम्नलिखित प्रश्न का उत्तर दीजिए।



कौन सी कोशिकाएं दिये गये आरेख के अणुओं की मदद/ऊद्दीपित करती हैं?

- (1) B - कोशिकाएं
- (2) T - कोशिकाएं
- (3) न्यूट्रोफिल कोशिकाएं
- (4) महाभक्षी कोशिकाएं

Options :

54025064249. 1

54025064250. 2

54025064251. 3

54025064252. 4

Question Number : 94 Question Id : 54025016064 Question Type : MCQ Option Shuffling : No

Is Question Mandatory : No Calculator : None Response Time : N.A Think Time : N.A

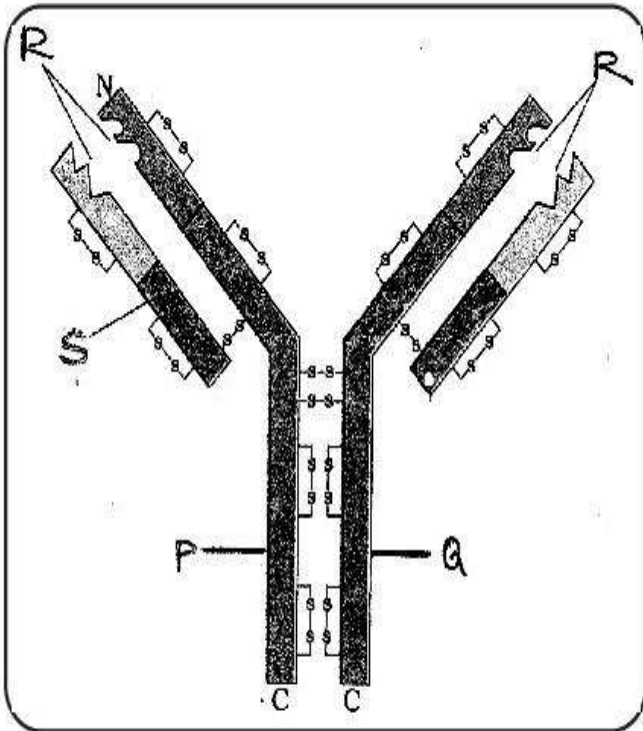
Minimum Instruction Time : 0

Correct Marks : 5 Wrong Marks : 1

Question Key Details :

Key	Value
Comprehension	Comp1

Observe the diagram and answer the following question.



The type of immunity provided by the molecule shown in the diagram :

- (1) Humoral
- (2) Cell mediated
- (3) Innate immunity
- (4) Both humoral and cell mediated

Options :

54025064253. 1

54025064254. 2

54025064255. 3

54025064256. 4

Question Number : 94 Question Id : 54025016064 Question Type : MCQ Option Shuffling : No

Is Question Mandatory : No Calculator : None Response Time : N.A Think Time : N.A

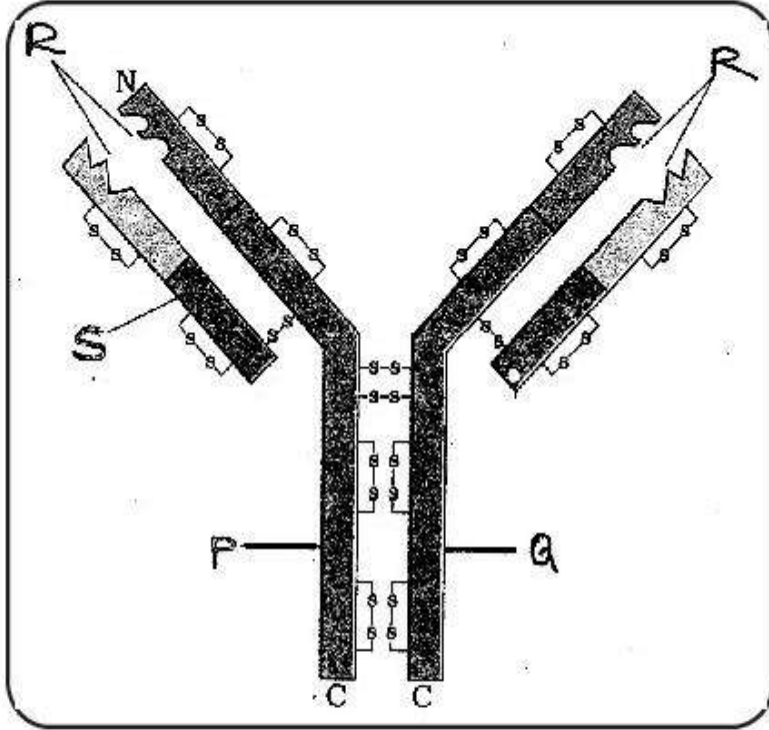
Minimum Instruction Time : 0

Correct Marks : 5 Wrong Marks : 1

Question Key Details :

Key	Value
Comprehension	Comp1

आरेख का अवलोकन करके निम्नलिखित प्रश्न का उत्तर दीजिए।



आरेख में दिये गये के अनुसार अणु किस प्रकार की प्रतिरक्षा प्रदान करते हैं ?

- (1) माध्यत
- (2) कोशिका के मध्य
- (3) सहज प्रतिरक्षा
- (4) दोनों कोशिका के मध्य तथा माध्यत

Options :

54025064253. 1

54025064254. 2

54025064255. 3

54025064256. 4

Question Number : 95 Question Id : 54025016065 Question Type : MCQ Option Shuffling : No

Is Question Mandatory : No Calculator : None Response Time : N.A Thin

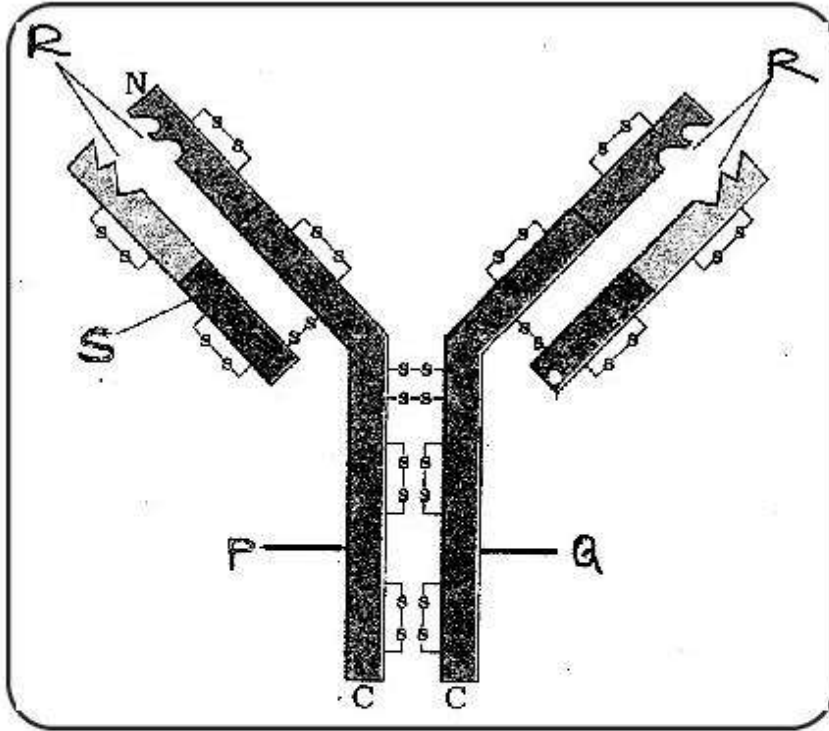
Minimum Instruction Time : 0

Correct Marks : 5 Wrong Marks : 1

Question Key Details :

Key	Value
Comprehension	Comp1

आरेख का अवलोकन करके निम्नलिखित प्रश्न का उत्तर दीजिए।



आरेख में 'R' किस को इंगित करता है?

- (1) लघु श्रृंखला
- (2) प्रतिजन बंधक स्थान
- (3) दीर्घ श्रृंखला
- (4) डाई सल्फाइड बंध

Options :

54025064257. 1

54025064258. 2

54025064259. 3

54025064260. 4

Sub-Section Number :

3

Sub-Section Id :

5402501140

Question Shuffling Allowed :

No

Is Section Default? :

null

Question Number : 96 Question Id : 54025016066 Question Type : MCQ Option Shuffling : No

Is Question Mandatory : No Calculator : None Response Time : N.A Think Time : N.A

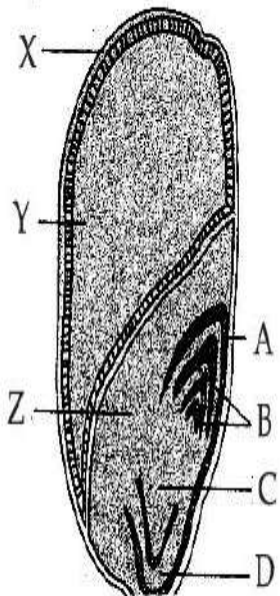
Minimum Instruction Time : 0

Correct Marks : 5 Wrong Marks : 1

Question Key Details :

Key	Value
Comprehension	Comp2

The following diagram shows an endospermic seed of Maize grain. Answer the following question :



'X' developed from which part of angiospermic plant ?

- (1) Ovary cell
- (2) Zygote
- (3) Sepals
- (4) Petals

Options :

54025064261. 1

54025064262. 2

54025064263. 3

54025064264. 4

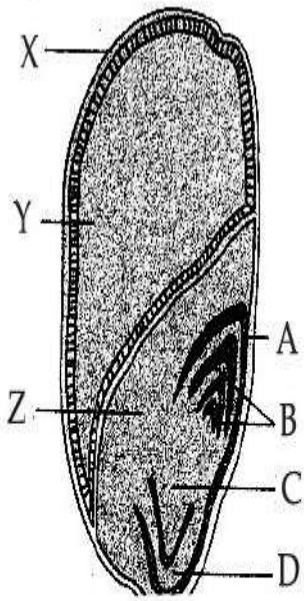
Question Number : 96 Question Id : 54025016066 Question Type : MCQ Option Shuffling : No
Is Question Mandatory : No Calculator : None Response Time : N.A Think Time : N.A
Minimum Instruction Time : 0

Correct Marks : 5 Wrong Marks : 1

Question Key Details :

Key	Value
Comprehension	Comp2

निम्नलिखित आरेख में मक्का के दाने का भ्रूणपोष दर्शाया गया है। निम्नलिखित प्रश्न का उत्तर दीजिए :



'X' एंजियोस्पर्मिक पादपों के किस भाग से उत्पन्न होता है?

- (1) फल भित्ति
- (2) भ्रूण
- (3) परिदल
- (4) दल

Options :

54025064261. 1

54025064262. 2

54025064263. 3

54025064264. 4

Question Number : 97 Question Id : 54025016067 Question Type : MCQ Option Shuffling : No

Is Question Mandatory : No Calculator : None Response Time : N.A Think Time : N.A

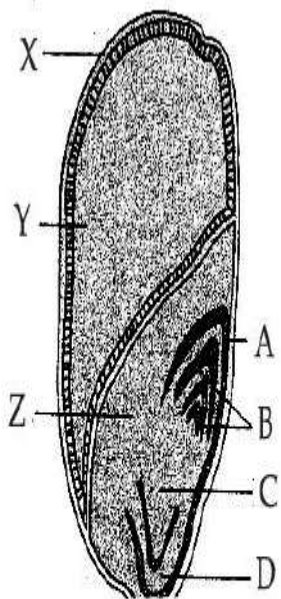
Minimum Instruction Time : 0

Correct Marks : 5 Wrong Marks : 1

Question Key Details :

Key	Value
Comprehension	Comp2

The following diagram shows an endospermic seed of Maize grain. Answer the following question :



The part which provides nourishment to the developing embryo is :

- (1) A
- (2) Y
- (3) B
- (4) D

Options :

54025064265. 1

54025064266. 2

54025064267. 3

54025064268. 4

Question Number : 97 Question Id : 54025016067 Question Type : MCQ (

Is Question Mandatory : No Calculator : None Response Time : N.A Think Time : N.A

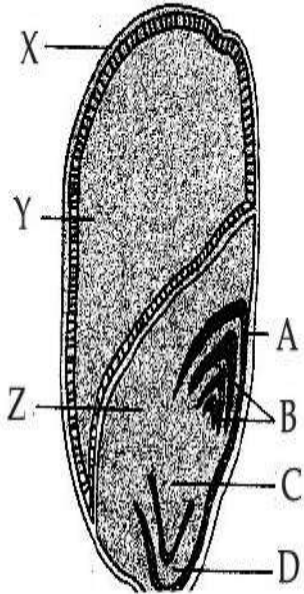
Minimum Instruction Time : 0

Correct Marks : 5 Wrong Marks : 1

Question Key Details :

Key	Value
Comprehension	Comp2

निम्नलिखित आरेख में मक्का के दाने का भ्रूणपोष दर्शाया गया है। निम्नलिखित प्रश्न का उत्तर दीजिए :



कौन सा भाग विकासशील भ्रूण का पोषण करता है?

- (1) A
- (2) Y
- (3) B
- (4) D

Options :

54025064265. 1

54025064266. 2

54025064267. 3

54025064268. 4

Question Number : 98 Question Id : 54025016068 Question Type : MCQ Option Shuffling : No

Is Question Mandatory : No Calculator : None Response Time : N.A Thin

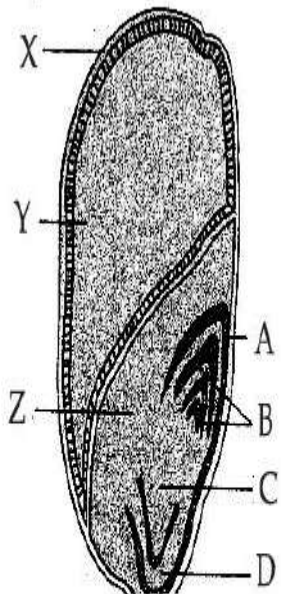
Minimum Instruction Time : 0

Correct Marks : 5 Wrong Marks : 1

Question Key Details :

Key	Value
Comprehension	Comp2

The following diagram shows an endospermic seed of Maize grain. Answer the following question :



In diagram the sheath which covers radicle is shown by ?

- (1) A
- (2) B
- (3) C
- (4) D

Options :

54025064269. 1

54025064270. 2

54025064271. 3

54025064272. 4

Question Number : 98 Question Id : 54025016068 Question Type : MCQ Option Shuffling : No

Is Question Mandatory : No Calculator : None Response Time : N.A Think Time : N.A

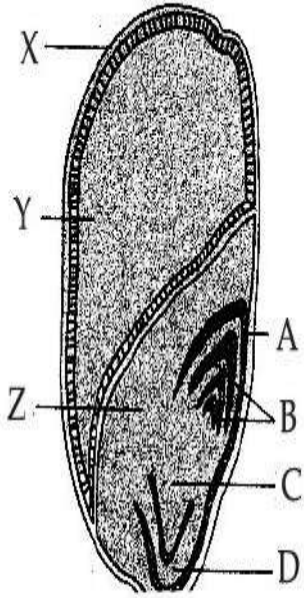
Minimum Instruction Time : 0

Correct Marks : 5 Wrong Marks : 1

Question Key Details :

Key	Value
Comprehension	Comp2

निम्नलिखित आरेख में मक्का के दाने का भ्रूणपोष दर्शाया गया है। निम्नलिखित प्रश्न का उत्तर दीजिए :



कौन सा आच्छंद, मूलांकर को ढकता है?

- (1) A
- (2) B
- (3) C
- (4) D

Options :

54025064269. 1

54025064270. 2

54025064271. 3

54025064272. 4

Question Number : 99 Question Id : 54025016069 Question Type : MCQ Option Shuffling : No

Is Question Mandatory : No Calculator : None Response Time : N.A Think Time : N.A

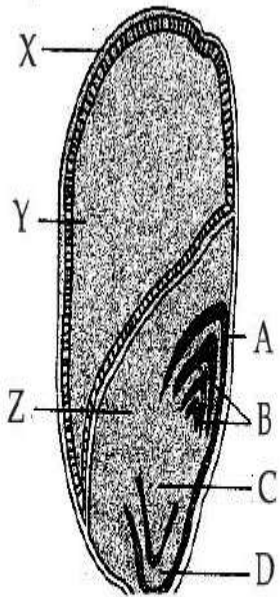
Minimum Instruction Time : 0

Correct Marks : 5 Wrong Marks : 1

Question Key Details :

Key	Value
Comprehension	Comp2

The following diagram shows an endospermic seed of Maize grain. Answer the following question :



In diagram the scutellum is represented by :

- (1) A
- (2) Y
- (3) Z
- (4) D

Options :

54025064273. 1

54025064274. 2

54025064275. 3

54025064276. 4

Question Number : 99 Question Id : 54025016069 Question Type : MCQ Option Shuffling : No

Is Question Mandatory : No Calculator : None Response Time : N.A Think Time : N.A

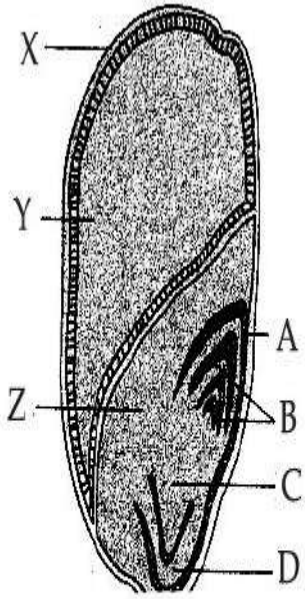
Minimum Instruction Time : 0

Correct Marks : 5 Wrong Marks : 1

Question Key Details :

Key	Value

निम्नलिखित आरेख में मक्का के दाने का भ्रूणपोष दर्शाया गया है। निम्नलिखित प्रश्न का उत्तर दीजिए :



स्क्यूटेलम प्रदर्शित करता है :

- (1) A
- (2) Y
- (3) Z
- (4) D

Options :

54025064273. 1

54025064274. 2

54025064275. 3

54025064276. 4

Question Number : 100 Question Id : 54025016070 Question Type : MCQ Option Shuffling : No

Is Question Mandatory : No Calculator : None Response Time : N.A Think Time : N.A

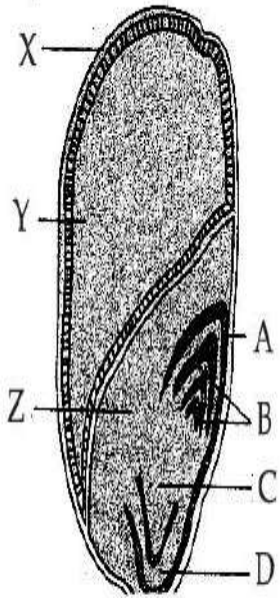
Minimum Instruction Time : 0

Correct Marks : 5 Wrong Marks : 1

Question Key Details :

Key	Value
Comprehension	Comp2

The following diagram shows an endospermic seed of Maize grain. Answer the following question :



In diagram the sheath which covers plumule is shown by :

- (1) A
- (2) B
- (3) C
- (4) D

Options :

54025064277. 1

54025064278. 2

54025064279. 3

54025064280. 4

Question Number : 100 Question Id : 54025016070 Question Type : MCQ Option Shuffling : No

Is Question Mandatory : No Calculator : None Response Time : N.A Think Time : N.A

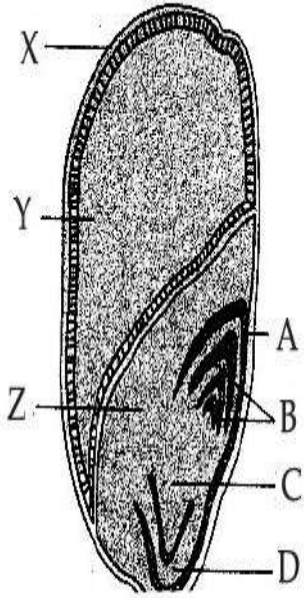
Minimum Instruction Time : 0

Correct Marks : 5 Wrong Marks : 1

Question Key Details :

Key	Value
Comprehension	Comp2

निम्नलिखित आरेख में मक्का के दाने का भ्रूणपोष दर्शाया गया है। निम्नलिखित प्रश्न का उत्तर दीजिए :



आरेख के अनुसार कौन सा आच्छद प्रांकुर को ढकता है?

- (1) A
- (2) B
- (3) C
- (4) D

Options :

54025064277. 1

54025064278. 2

54025064279. 3

54025064280. 4

Psychology

Group Number :	3
Group Id :	540250336
Group Maximum Duration :	45
Group Minimum Duration :	45
Show Attended Group? :	No
Edit Attended Group? :	No