

485584156318. 2

485584156319. 3

485584156320. 4

General Test

Group Number : 24
Group Id : 485584905
Group Maximum Duration : 60
Group Minimum Duration : 60
Show Attended Group? : No
Edit Attended Group? : No
Break time : 0
Group Marks : 250
Is this Group for Examiner? : No
Examiner permission : Cant View
Show Progress Bar? : No

General Test

Section Id : 4855841049
Section Number : 1
Section type : Online
Mandatory or Optional : Mandatory
Number of Questions : 60
Number of Questions to be attempted : 50
Section Marks : 250
Enable Mark as Answered Mark for Review and Clear Response : Yes
Maximum Instruction Time : 0
Sub-Section Number : 1
Sub-Section Id : 4855842967
Question Shuffling Allowed : Yes
Is Section Default? : null

Question Number : 1171 **Question Id :** 48558438401 **Question Type :** MCQ **Option Shuffling :** No **Is Question Mandatory :** No **Calculator :** None
Response Time : N.A **Think Time :** N.A **Minimum Instruction Time :** 0

Correct Marks : 5 **Wrong Marks :** 1

Question Key Details :

Key	Value
Comprehension	MCQ

In $\triangle ABC$, BD is the internal bisector of $\angle B$ meeting AC at D . If $CD = 7$ cm and $AC = 10.5$ cm, then $AB:BC$ is

1. 2:3

2. 1:2

3. 3:4

4. 3:2

Options :

485584153601. 1

485584153602. 2

485584153603. 3

485584153604. 4

Question Number : 1171 **Question Id :** 48558438401 **Question Type :** MCQ **Option Shuffling :** No **Is Question Mandatory :** No **Calculator :** None
Response Time : N.A **Think Time :** N.A **Minimum Instruction Time :** 0

Correct Marks : 5 **Wrong Marks :** 1

Question Key Details :

Key	Value
Comprehension	MCQ

यदि $\triangle ABC$ में BD , $\angle B$ को अंतरिक समद्विभाजित कर AC भुजा में बिन्दु D पर मिलता है। यदि $CD = 7$ cm और $AC = 10.5$ cm तो $AB:BC$ _____ है।

1. 2:3
2. 1:2
3. 3:4
4. 3:2

Options :

485584153601. 1
 485584153602. 2
 485584153603. 3
 485584153604. 4

Question Number : 1172 Question Id : 48558438402 Question Type : MCQ Option Shuffling : No Is Question Mandatory : No Calculator : None
 Response Time : N.A Think Time : N.A Minimum Instruction Time : 0
 Correct Marks : 5 Wrong Marks : 1

Question Key Details :

Key	Value
Comprehension	MCQ

Which one of the following is not an Arithmetic progression?

1. 1, 3, 5, 7, ---
2. 2, 4, 8, 16 ---
3. -5, -10, -15, -20 ---
4. 12, 16, 20, 24 ---

Options :

485584153605. 1
 485584153606. 2
 485584153607. 3
 485584153608. 4

Question Number : 1172 Question Id : 48558438402 Question Type : MCQ Option Shuffling : No Is Question Mandatory : No Calculator : None
 Response Time : N.A Think Time : N.A Minimum Instruction Time : 0
 Correct Marks : 5 Wrong Marks : 1

Question Key Details :

Key	Value
Comprehension	MCQ

निम्नलिखित में कौन सा अंकगणितीय श्रेणी नहीं है।

1. 1, 3, 5, 7, ---
2. 2, 4, 8, 16 ---
3. -5, -10, -15, -20 ---
4. 12, 16, 20, 24 ---

Options :

485584153605. 1
 485584153606. 2

485584153607.3

485584153608.4

Question Number : 1173 Question Id : 48558438403 Question Type : MCQ Option Shuffling : No Is Question Mandatory : No Calculator : None
Response Time : N.A Think Time : N.A Minimum Instruction Time : 0

Correct Marks : 5 Wrong Marks : 1

Question Key Details :

Key	Value
Comprehension	MCQ

Simplify $\sqrt{54 - \sqrt{20 + \sqrt{32 - \sqrt{49}}}}$

1. $\sqrt{17}$

2. 7

3. 17

4. $3\sqrt{17}$

Options :

485584153609.1

485584153610.2

485584153611.3

485584153612.4

Question Number : 1173 Question Id : 48558438403 Question Type : MCQ Option Shuffling : No Is Question Mandatory : No Calculator : None
Response Time : N.A Think Time : N.A Minimum Instruction Time : 0

Correct Marks : 5 Wrong Marks : 1

Question Key Details :

Key	Value
Comprehension	MCQ

सरल कीजिए $\sqrt{54 - \sqrt{20 + \sqrt{32 - \sqrt{49}}}}$

1. $\sqrt{17}$

2. 7

3. 17

4. $3\sqrt{17}$

Options :

485584153609.1

485584153610.2

485584153611.3

485584153612.4

Question Number : 1174 Question Id : 48558438404 Question Type : MCQ Option Shuffling : No Is Question Mandatory : No Calculator : None
Response Time : N.A Think Time : N.A Minimum Instruction Time : 0

Correct Marks : 5 Wrong Marks : 1

Question Key Details :

Key	Value
Comprehension	MCQ

$$121.2 - 1.212 + 12.12$$

1. 132.24
2. 132.108
3. 132.112
4. 132.132

Options :

485584153613. 1
485584153614. 2
485584153615. 3
485584153616. 4

Question Number : 1174 Question Id : 48558438404 Question Type : MCQ Option Shuffling : No Is Question Mandatory : No Calculator : None Response Time : N.A Think Time : N.A Minimum Instruction Time : 0

Correct Marks : 5 Wrong Marks : 1

Question Key Details :

Key	Value
Comprehension	MCQ

आकलन कीजिए: $121.2 - 1.212 + 12.12$

1. 132.24
2. 132.108
3. 132.112
4. 132.132

Options :

485584153613. 1
485584153614. 2
485584153615. 3
485584153616. 4

Question Number : 1175 Question Id : 48558438405 Question Type : MCQ Option Shuffling : No Is Question Mandatory : No Calculator : None Response Time : N.A Think Time : N.A Minimum Instruction Time : 0

Correct Marks : 5 Wrong Marks : 1

Question Key Details :

Key	Value
Comprehension	MCQ

Four men can do a work in 10 days and 5 women can do the same work in 12 days. How many women must work with 3 men to do the same work in 8 days?

1. 2
2. 3
3. 4
4. 5

Options :

485584153617. 1
485584153618. 2
485584153619. 3
485584153620. 4

Question Number : 1175 Question Id : 48558438405 Question Type : MCQ Option Shuffling : No Is Question Mandatory : No Calculator : None
Response Time : N.A Think Time : N.A Minimum Instruction Time : 0

Correct Marks : 5 Wrong Marks : 1

Question Key Details :

Key	Value
Comprehension	MCQ

4 आदमी किसी काम को 10 दिन में करते हैं और 5 औरतें उसी काम को 12 दिन में करती हैं। इसी काम को करने के लिए 3 आदमियों के साथ कितनी औरतें काम करें कि यह काम 8 दिन में पूरा हो जाए।

1. 2

2. 3

3. 4

4. 5

Options :

485584153617. 1

485584153618. 2

485584153619. 3

485584153620. 4

Question Number : 1176 Question Id : 48558438406 Question Type : MCQ Option Shuffling : No Is Question Mandatory : No Calculator : None
Response Time : N.A Think Time : N.A Minimum Instruction Time : 0

Correct Marks : 5 Wrong Marks : 1

Question Key Details :

Key	Value
Comprehension	MCQ

Arun covers first 28 kms of his journey in 45 minutes and the remaining 32 kms in 35 minutes. What is his average speed in m/s?

1. $12\frac{1}{2}$

2. 13

3. 15

4. $16\frac{1}{2}$

Options :

485584153621. 1

485584153622. 2

485584153623. 3

485584153624. 4

Question Number : 1176 Question Id : 48558438406 Question Type : MCQ Option Shuffling : No Is Question Mandatory : No Calculator : None
Response Time : N.A Think Time : N.A Minimum Instruction Time : 0

Correct Marks : 5 Wrong Marks : 1

Question Key Details :

Key	Value
Comprehension	MCQ

अरुण अपनी यात्रा में पहले 28 km की दूरी 45 मिनट में तय करता है और शेष 32 km की दूरी 35 मिनट में। उसकी m/s में औसत चाल क्या है?

1. $12\frac{1}{2}$

2. 13

3. 15

4. $16\frac{1}{2}$

Options :

485584153621. 1

485584153622. 2

485584153623. 3

485584153624. 4

Question Number : 1177 Question Id : 48558438407 Question Type : MCQ Option Shuffling : No Is Question Mandatory : No Calculator : None Response Time : N.A Think Time : N.A Minimum Instruction Time : 0

Correct Marks : 5 Wrong Marks : 1

Question Key Details :

Key	Value
Comprehension	MCQ

A metallic sphere of radius 8 cm is melted to form a cone with radius same as that of sphere. What is the height of the cone (in cm)?

1. 10.7

2. 12

3. 16

4. 32

Options :

485584153625. 1

485584153626. 2

485584153627. 3

485584153628. 4

Question Number : 1177 Question Id : 48558438407 Question Type : MCQ Option Shuffling : No Is Question Mandatory : No Calculator : None Response Time : N.A Think Time : N.A Minimum Instruction Time : 0

Correct Marks : 5 Wrong Marks : 1

Question Key Details :

Key	Value
Comprehension	MCQ

एक 8 cm त्रिज्या के गोले को पिघलाकर गोले के समान त्रिज्या का शंकु बनाया जाता है। शंकु की ऊँचाई (cm) में क्या होगी?

1. 10.7

2. 12

3. 16

4. 32

Options :

485584153625. 1

485584153626. 2

485584153627. 3

485584153628. 4

Question Number : 1178 Question Id : 48558438408 Question Type : MCQ Option Shuffling : No Is Question Mandatory : No Calculator : None
Response Time : N.A Think Time : N.A Minimum Instruction Time : 0

Correct Marks : 5 Wrong Marks : 1

Question Key Details :

Key	Value
Comprehension	MCQ

A is three years younger than B, who is twice as old as C. If the sum of their ages be 52 years, then what will be the age of B (in years) two years hence?

1. 20

2. 22

3. 24

4. 26

Options :

485584153629. 1

485584153630. 2

485584153631. 3

485584153632. 4

Question Number : 1178 Question Id : 48558438408 Question Type : MCQ Option Shuffling : No Is Question Mandatory : No Calculator : None
Response Time : N.A Think Time : N.A Minimum Instruction Time : 0

Correct Marks : 5 Wrong Marks : 1

Question Key Details :

Key	Value
Comprehension	MCQ

A आयु में B से तीन वर्ष छोटा है और B, C की आयु का दोगुना है। यदि इनकी आयु का योग 52 वर्ष है तो आज से 2 वर्ष पश्चात B की आयु (वर्ष में) क्या होगी?

1. 20

2. 22

3. 24

4. 26

Options :

485584153629. 1

485584153630. 2

485584153631. 3

485584153632. 4

Question Number : 1179 Question Id : 48558438409 Question Type : MCQ Option Shuffling : No Is Question Mandatory : No Calculator : None
Response Time : N.A Think Time : N.A Minimum Instruction Time : 0

Correct Marks : 5 Wrong Marks : 1

Question Key Details :

Key	Value
Comprehension	MCQ

If $2 \sin 2\theta = \sqrt{3}$, where $0 \leq 2\theta \leq 90^\circ$, then find the value of $\cos 3\theta$

1. 0

2. 1

3. $\frac{\sqrt{3}}{2}$

4. $\frac{1}{2}$

Options :

485584153633. 1

485584153634. 2

485584153635. 3

485584153636. 4

Question Number : 1179 Question Id : 48558438409 Question Type : MCQ Option Shuffling : No Is Question Mandatory : No Calculator : None

Response Time : N.A Think Time : N.A Minimum Instruction Time : 0

Correct Marks : 5 Wrong Marks : 1

Question Key Details :

Key	Value
Comprehension	MCQ

यदि $2 \sin 2\theta = \sqrt{3}$ जहाँ $0 \leq 2\theta \leq 90^\circ$, तो $\cos 3\theta$ का मान ज्ञात कीजिए।

1. 0

2. 1

3. $\frac{\sqrt{3}}{2}$

4. $\frac{1}{2}$

Options :

485584153633. 1

485584153634. 2

485584153635. 3

485584153636. 4

Question Number : 1180 Question Id : 48558438410 Question Type : MCQ Option Shuffling : No Is Question Mandatory : No Calculator : None

Response Time : N.A Think Time : N.A Minimum Instruction Time : 0

Correct Marks : 5 Wrong Marks : 1

Question Key Details :

Key	Value
Comprehension	MCQ

Mean of 28, 30, 26, (K+6) and (K+1) is 25. Find the mean of 32, 39, and 2k

1. 25

2. 30

3. 35

4. 36

Options :

485584153637. 1

485584153638. 2
485584153639. 3
485584153640. 4

Question Number : 1180 Question Id : 48558438410 Question Type : MCQ Option Shuffling : No Is Question Mandatory : No Calculator : None
Response Time : N.A Think Time : N.A Minimum Instruction Time : 0
Correct Marks : 5 Wrong Marks : 1

Question Key Details :

Key	Value
Comprehension	MCQ

28, 30, 26, (K+6) और (K+1) का माध्य 25 है। 32, 39 और 2k का माध्य ज्ञात कीजिए।

1. 25
2. 30
3. 35
4. 36

Options :

485584153637. 1
485584153638. 2
485584153639. 3
485584153640. 4

Question Number : 1181 Question Id : 48558438411 Question Type : MCQ Option Shuffling : No Is Question Mandatory : No Calculator : None
Response Time : N.A Think Time : N.A Minimum Instruction Time : 0
Correct Marks : 5 Wrong Marks : 1

Question Key Details :

Key	Value
Comprehension	MCQ

A card is drawn at random from a well shuffled pack of 52 cards. What is the probability of getting a 'two' of hearts or a 'three' of diamonds

1. $\frac{2}{13}$
2. $\frac{5}{13}$
3. $\frac{1}{26}$
4. $\frac{5}{26}$

Options :

485584153641. 1
485584153642. 2
485584153643. 3
485584153644. 4

Question Number : 1181 Question Id : 48558438411 Question Type : MCQ Option Shuffling : No Is Question Mandatory : No Calculator : None
Response Time : N.A Think Time : N.A Minimum Instruction Time : 0
Correct Marks : 5 Wrong Marks : 1

Question Key Details :

Key	Value
Comprehension	MCQ

एक अच्छी तरह से फेंटे गए 52 तारा के पत्तों की गड्डी से एक पत्ता निकाला गया। 2 पान या 3 ईट के पत्ते के आने की प्रायिकता क्या होगी?

1. $\frac{2}{13}$
2. $\frac{5}{13}$
3. $\frac{1}{26}$
4. $\frac{5}{26}$

Options :

485584153641. 1
485584153642. 2
485584153643. 3
485584153644. 4

Question Number : 1182 Question Id : 48558438412 Question Type : MCQ Option Shuffling : No Is Question Mandatory : No Calculator : None Response Time : N.A Think Time : N.A Minimum Instruction Time : 0 Correct Marks : 5 Wrong Marks : 1

Question Key Details :

Key	Value
Comprehension	MCQ

Find the average of first 10 prime numbers.

1. 10
2. 10.1
3. 12.2
4. 12.9

Options :

485584153645. 1
485584153646. 2
485584153647. 3
485584153648. 4

Question Number : 1182 Question Id : 48558438412 Question Type : MCQ Option Shuffling : No Is Question Mandatory : No Calculator : None Response Time : N.A Think Time : N.A Minimum Instruction Time : 0 Correct Marks : 5 Wrong Marks : 1

Question Key Details :

Key	Value
Comprehension	MCQ

पहली 10 अभाज्य संख्याओं का औसत ज्ञात कीजिए।

1. 10
2. 10.1
3. 12.2
4. 12.9

Options :

485584153645. 1

485584153646. 2

485584153647. 3

485584153648. 4

Question Number : 1183 Question Id : 48558438413 Question Type : MCQ Option Shuffling : No Is Question Mandatory : No Calculator : None Response Time : N.A Think Time : N.A Minimum Instruction Time : 0

Correct Marks : 5 Wrong Marks : 1

Question Key Details :

Key	Value
Comprehension	MCQ

In what ratio the line segment joining the points $(-2, 3)$ and $(3, -7)$ is divided by x -axis?

1. 2:3

2. 3:2

3. 3:7

4. 1:4

Options :

485584153649. 1

485584153650. 2

485584153651. 3

485584153652. 4

Question Number : 1183 Question Id : 48558438413 Question Type : MCQ Option Shuffling : No Is Question Mandatory : No Calculator : None Response Time : N.A Think Time : N.A Minimum Instruction Time : 0

Correct Marks : 5 Wrong Marks : 1

Question Key Details :

Key	Value
Comprehension	MCQ

$(-2, 3)$ और $(3, -7)$ को जोड़ने वाले रेखा खण्ड को x -अक्ष किस अनुपात में विभाजित करेगा ?

1. 2:3

2. 3:2

3. 3:7

4. 1:4

Options :

485584153649. 1

485584153650. 2

485584153651. 3

485584153652. 4

Question Number : 1184 Question Id : 48558438414 Question Type : MCQ Option Shuffling : No Is Question Mandatory : No Calculator : None Response Time : N.A Think Time : N.A Minimum Instruction Time : 0

Correct Marks : 5 Wrong Marks : 1

Question Key Details :

Key	Value
Comprehension	MCQ

The difference between length and breadth of a rectangle is 15 m. If the perimeter of rectangle is 162 m, then the area of the rectangle (in m^2) is,

1. 3168
2. 2524
3. 1872
4. 1584

Options :

- 485584153653. 1
- 485584153654. 2
- 485584153655. 3
- 485584153656. 4

Question Number : 1184 Question Id : 48558438414 Question Type : MCQ Option Shuffling : No Is Question Mandatory : No Calculator : None
Response Time : N.A Think Time : N.A Minimum Instruction Time : 0
Correct Marks : 5 Wrong Marks : 1

Question Key Details :

Key	Value
Comprehension	MCQ

किसी आयत की लंबाई और चौड़ाई का अंतर 15m है। यदि इस आयत का परिमाप 162m है तो आयत का क्षेत्रफल (m^2 में) है _____

1. 3168
2. 2524
3. 1872
4. 1584

Options :

- 485584153653. 1
- 485584153654. 2
- 485584153655. 3
- 485584153656. 4

Question Number : 1185 Question Id : 48558438415 Question Type : MCQ Option Shuffling : No Is Question Mandatory : No Calculator : None
Response Time : N.A Think Time : N.A Minimum Instruction Time : 0
Correct Marks : 5 Wrong Marks : 1

Question Key Details :

Key	Value
Comprehension	MCQ

A shopkeeper marked his goods 40% higher than their cost price and allows 20% discount on every item. Find his net profit percentage.

1. 20%
2. 15%
3. 12%
4. 10%

Options :

- 485584153657. 1
- 485584153658. 2

485584153659. 3

485584153660. 4

Question Number : 1185 Question Id : 48558438415 Question Type : MCQ Option Shuffling : No Is Question Mandatory : No Calculator : None
Response Time : N.A Think Time : N.A Minimum Instruction Time : 0

Correct Marks : 5 Wrong Marks : 1

Question Key Details :

Key	Value
Comprehension	MCQ

एक दुकानदार ने अपने समान को क्रय मूल्य से 40% अधिक पर अंकित किया और प्रत्येक वस्तु पर 20% की छूट दी।
उसका शुद्ध लाभ प्रतिशत ज्ञात कीजिए।

1. 20%

2. 15%

3. 12%

4. 10%

Options :

485584153657. 1

485584153658. 2

485584153659. 3

485584153660. 4

Question Number : 1186 Question Id : 48558438416 Question Type : MCQ Option Shuffling : No Is Question Mandatory : No Calculator : None
Response Time : N.A Think Time : N.A Minimum Instruction Time : 0

Correct Marks : 5 Wrong Marks : 1

Question Key Details :

Key	Value
Comprehension	MCQ

A and B started a business by investing ₹10,000 and ₹18,000 respectively. After 4 months C joined the business with a capital of ₹12,000. After two more months B left the business his capital. At the end of the year A got a share of ₹7,500 in the profit. What is the total profit earned?

1. ₹12750

2. ₹18000

3. ₹20250

4. ₹22300

Options :

485584153661. 1

485584153662. 2

485584153663. 3

485584153664. 4

Question Number : 1186 Question Id : 48558438416 Question Type : MCQ Option Shuffling : No Is Question Mandatory : No Calculator : None
Response Time : N.A Think Time : N.A Minimum Instruction Time : 0

Correct Marks : 5 Wrong Marks : 1

Question Key Details :

Key	Value
Comprehension	MCQ

A और B ने क्रमशः ₹10,000 एवं ₹ 18,000 निवेश कर एक व्यवसाय प्रारंभ किया। चार महीनों के पश्चात C, ₹ 12,000 की पूंजी के साथ इस व्यवसाय में शामिल हुआ। उसके 2 महीनों के पश्चात B ने अपनी पूंजी के साथ व्यवसाय छोड़ दिया। साल के अंत में A को ₹ 7,500 का लाभ हुआ। कुल कमाया गया लाभ क्या होगा ?

1. ₹12750
2. ₹18000
3. ₹20250
4. ₹22300

Options :

485584153661. 1
485584153662. 2
485584153663. 3
485584153664. 4

Question Number : 1187 Question Id : 48558438417 Question Type : MCQ Option Shuffling : No Is Question Mandatory : No Calculator : None Response Time : N.A Think Time : N.A Minimum Instruction Time : 0

Correct Marks : 5 Wrong Marks : 1

Question Key Details :

Key	Value
Comprehension	MCQ

A shopkeeper bought an item for ₹600 and marked on it 50% higher than its cost price. He allowed 20% discount on it. Find his profit percentage

1. 20%
2. 25%
3. 30%
4. 36%

Options :

485584153665. 1
485584153666. 2
485584153667. 3
485584153668. 4

Question Number : 1187 Question Id : 48558438417 Question Type : MCQ Option Shuffling : No Is Question Mandatory : No Calculator : None Response Time : N.A Think Time : N.A Minimum Instruction Time : 0

Correct Marks : 5 Wrong Marks : 1

Question Key Details :

Key	Value
Comprehension	MCQ

एक दुकानदार ने ₹ 600 में एक सामान खरीदा और 50% आधिक्य से इसका मूल्य अंकित किया। उसने 20% की छूट दी। उसके लाभ प्रतिशत ज्ञात कीजिए।

1. 20%
2. 25%
3. 30%
4. 36%

Options :

485584153665. 1

485584153666. 2
485584153667. 3
485584153668. 4

Question Number : 1188 Question Id : 48558438418 Question Type : MCQ Option Shuffling : No Is Question Mandatory : No Calculator : None
Response Time : N.A Think Time : N.A Minimum Instruction Time : 0

Correct Marks : 5 Wrong Marks : 1

Question Key Details :

Key	Value
Comprehension	MCQ

A borrowed Rs 10000 each from his friends B and C for 2 years. He was supposed to pay compound interest at 10% per annum to B and simple interest 11% per annum to C. Who charged more interest at the end of 2 years and how much more?

1. B, Rs 20 more
2. B, Rs 80 more
3. C, Rs 100 more
4. C, Rs 120 more

Options :

485584153669. 1
485584153670. 2
485584153671. 3
485584153672. 4

Question Number : 1188 Question Id : 48558438418 Question Type : MCQ Option Shuffling : No Is Question Mandatory : No Calculator : None
Response Time : N.A Think Time : N.A Minimum Instruction Time : 0

Correct Marks : 5 Wrong Marks : 1

Question Key Details :

Key	Value
Comprehension	MCQ

A ने अपने दो मित्रों A और B, प्रत्येक से ₹ 10,000, 2 वर्षों के लिए उधार लिए। उसने 10% वार्षिक चक्रवृद्धि ब्याज की दर से B को और 11% वार्षिक साधारण ब्याज की दर से C को भुगतान करना तय किया। किसने 2 वर्ष के अंत में अधिक ब्याज लिया और कितना?

1. B, ₹20 अधिक
2. B, ₹80 अधिक
3. C, ₹100 अधिक
4. C, ₹120 अधिक

Options :

485584153669. 1
485584153670. 2
485584153671. 3
485584153672. 4

Question Number : 1189 Question Id : 48558438419 Question Type : MCQ Option Shuffling : No Is Question Mandatory : No Calculator : None
Response Time : N.A Think Time : N.A Minimum Instruction Time : 0

Correct Marks : 5 Wrong Marks : 1

Question Key Details :

Key	Value
Comprehension	MCQ

A's monthly salary was ₹40000 and he used to save ₹10000 per month. His salary increased by 25% and expenditure increased by 15%. By what percent his savings increased?

1. 40%
2. 50%
3. 55%
4. 60%

Options :

485584153673. 1
485584153674. 2
485584153675. 3
485584153676. 4

Question Number : 1189 Question Id : 48558438419 Question Type : MCQ Option Shuffling : No Is Question Mandatory : No Calculator : None Response Time : N.A Think Time : N.A Minimum Instruction Time : 0 Correct Marks : 5 Wrong Marks : 1

Question Key Details :

Key	Value
Comprehension	MCQ

A का मासिक वेतन ₹40,000 है और वह ₹10,000 प्रति माह बचाता है। उसका वेतन 25% बढ़ा और 15% खर्चा बढ़ा। कितने प्रतिशत उसकी बचत बढ़ी?

1. 40%
2. 50%
3. 55%
4. 60%

Options :

485584153673. 1
485584153674. 2
485584153675. 3
485584153676. 4

Question Number : 1190 Question Id : 48558438420 Question Type : MCQ Option Shuffling : No Is Question Mandatory : No Calculator : None Response Time : N.A Think Time : N.A Minimum Instruction Time : 0 Correct Marks : 5 Wrong Marks : 1

Question Key Details :

Key	Value
Comprehension	MCQ

If $a : b = \frac{2}{3} : \frac{1}{4}$ and $b : c = \frac{3}{4} : \frac{4}{5}$, then find a:b:c

1. 20:8:15
2. 20:16:15
3. 40:15:12
4. 40:15:16

Options :

485584153677. 1
485584153678. 2

485584153679. 3
485584153680. 4

Question Number : 1190 Question Id : 48558438420 Question Type : MCQ Option Shuffling : No Is Question Mandatory : No Calculator : None
Response Time : N.A Think Time : N.A Minimum Instruction Time : 0
Correct Marks : 5 Wrong Marks : 1

Question Key Details :

Key	Value
Comprehension	MCQ

यदि $a : b = \frac{2}{3} : \frac{1}{4}$ और $b : c = \frac{3}{4} : \frac{4}{5}$, तो a:b:c ज्ञात कीजिए।

1. 20:8:15
2. 20:16:15
3. 40:15:12
4. 40:15:16

Options :

485584153677. 1
485584153678. 2
485584153679. 3
485584153680. 4

Question Number : 1191 Question Id : 48558438421 Question Type : MCQ Option Shuffling : No Is Question Mandatory : No Calculator : None
Response Time : N.A Think Time : N.A Minimum Instruction Time : 0

Correct Marks : 5 Wrong Marks : 1

Question Key Details :

Key	Value
Comprehension	MCQ

Read the following statements and choose the correct conclusion that can be logically inferred from these statements.

Statements:

- A. All bulls are bells.
 - B. Some bulls are cows.
 - C. Some bells are chairs.
1. All bells are cow.
 2. Some cows are chairs.
 3. Some bells are bulls.
 4. All bells are bulls.

Options :

485584153681. 1
485584153682. 2
485584153683. 3
485584153684. 4

Question Number : 1191 Question Id : 48558438421 Question Type : MCQ Option Shuffling : No Is Question Mandatory : No Calculator : None
Response Time : N.A Think Time : N.A Minimum Instruction Time : 0

Correct Marks : 5 Wrong Marks : 1

Question Key Details :

Key	Value
Comprehension	MCQ

निम्नलिखित कथनों को पढ़िए और सही तार्किक निर्णय द्वारा चयन कीजिए

कथन:

- A. सभी बैल घंटियाँ हैं।
 - B. कुछ बैल गाय हैं।
 - C. कुछ घंटियाँ कुर्सियाँ हैं।
1. सभी घंटियाँ गाय हैं।
 2. कुछ गाय कुर्सियाँ हैं।
 3. कुछ घंटियाँ बैल हैं।
 4. सभी घंटियाँ बैल हैं।

Options :

- 485584153681. 1
- 485584153682. 2
- 485584153683. 3
- 485584153684. 4

Question Number : 1192 Question Id : 48558438422 Question Type : MCQ Option Shuffling : No Is Question Mandatory : No Calculator : None Response Time : N.A Think Time : N.A Minimum Instruction Time : 0

Correct Marks : 5 Wrong Marks : 1

Question Key Details :

Key	Value
Comprehension	MCQ

Six persons A,B,C,D,E and F are sitting in a row facing North. A and F are sitting at two extreme ends of the row, B is to the immediate right of A and D is 2nd left of F. What is the position of E with respect to A.

- A. E is to the right of A.
- B. E is to the left of C.

Which statement is sufficient to answer the question or not

1. If A alone sufficient only
2. If B alone sufficient only
3. If A and B needed together
4. If A and B both are not sufficient

Options :

- 485584153685. 1
- 485584153686. 2
- 485584153687. 3
- 485584153688. 4

Question Number : 1192 Question Id : 48558438422 Question Type : MCQ Option Shuffling : No Is Question Mandatory : No Calculator : None Response Time : N.A Think Time : N.A Minimum Instruction Time : 0

Correct Marks : 5 Wrong Marks : 1

Question Key Details :

Key	Value
Comprehension	MCQ

A, B, C, D, E और F छः लोग उत्तर दिशा की ओर मुख करके पंक्ति में बैठे हैं। A और F पंक्ति के सिरे पर बैठे हैं। B, A के दाईं ओर और D, F के बाईं ओर से दूसरा है। A के सामने E की स्थिति क्या है?

- A. E, A के दाईं ओर है।
- B. E, C के बाईं ओर है।

उत्तर ज्ञात करने के लिए कौन-सा कथन पर्याप्त है।

नीचे दिए गए विकल्पों में से सही उत्तर का चयन कीजिए:

- 1. यदि A अकेला पर्याप्त है
- 2. यदि B अकेला पर्याप्त है
- 3. यदि A और B दोनों ही आवश्यक हैं।
- 4. यदि A और B दोनों ही पर्याप्त नहीं हैं।

Options :

- 485584153685. 1
- 485584153686. 2
- 485584153687. 3
- 485584153688. 4

Question Number : 1193 Question Id : 48558438423 Question Type : MCQ Option Shuffling : No Is Question Mandatory : No Calculator : None Response Time : N.A Think Time : N.A Minimum Instruction Time : 0

Correct Marks : 5 Wrong Marks : 1

Question Key Details :

Key	Value
Comprehension	MCQ

If each of the letters in the English alphabet is assigned an even numerical value by giving A = 2, B = 4 and so on, then what would be the total value of the letters of word 'CUET' when similarly coded?

- 1. 78
- 2. 76
- 3. 98
- 4. 96

Options :

- 485584153689. 1
- 485584153690. 2
- 485584153691. 3
- 485584153692. 4

Question Number : 1193 Question Id : 48558438423 Question Type : MCQ Option Shuffling : No Is Question Mandatory : No Calculator : None Response Time : N.A Think Time : N.A Minimum Instruction Time : 0

Correct Marks : 5 Wrong Marks : 1

Question Key Details :

Key	Value
Comprehension	MCQ

यदि अंग्रेजी वर्णमाला के प्रत्येक वर्ण को सम संख्या से मानित किया जाए जैसे A=2, B=4 इत्यादि तो CUET शब्द के वर्णों का कुल मान क्या होगा यदि उन्हें समानरूप से कोड करें?

1. 78
2. 76
3. 98
4. 96

Options :


- 485584153689. 1
- 485584153690. 2
- 485584153691. 3
- 485584153692. 4

Question Number : 1194 Question Id : 48558438424 Question Type : MCQ Option Shuffling : No Is Question Mandatory : No Calculator : None
 Response Time : N.A Think Time : N.A Minimum Instruction Time : 0
 Correct Marks : 5 Wrong Marks : 1
 Question Key Details :

Key	Value
Comprehension	MCQ

Find out which of the following figures will complete the figure matrix:

problem figure



- 1.
- 2.
- 3.
- 4.

Options :

- 485584153693. 1
- 485584153694. 2
- 485584153695. 3
- 485584153696. 4

Question Number : 1194 Question Id : 48558438424 Question Type : MCQ Option Shuffling : No Is Question Mandatory : No Calculator : None

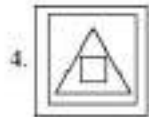
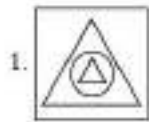

Response Time : N.A Think Time : N.A Minimum Instruction Time : 0

Correct Marks : 5 Wrong Marks : 1

Question Key Details :

Key	Value
Comprehension	MCQ

निम्नलिखित चित्रों में कौन सा चित्र दिए गए मैट्रिक्स को पूरा करता है?



Options :

485584153693. 1

485584153694. 2

485584153695. 3

485584153696. 4

Question Number : 1195 Question Id : 48558438425 Question Type : MCQ Option Shuffling : No Is Question Mandatory : No Calculator : None

Response Time : N.A Think Time : N.A Minimum Instruction Time : 0

Correct Marks : 5 Wrong Marks : 1

Question Key Details :

Key	Value
Comprehension	MCQ

In a certain code, FOOTBALL is written as UPPGMBMC. How is ALIGATOR written in that code?

1. HMJC SUPC

2. HMJA SUPA

3. HMJBSUPB

4. HMJDSUPD

Options :

485584153697. 1

485584153698. 2
485584153699. 3
485584153700. 4

Question Number : 1195 Question Id : 48558438425 Question Type : MCQ Option Shuffling : No Is Question Mandatory : No Calculator : None
Response Time : N.A Think Time : N.A Minimum Instruction Time : 0
Correct Marks : 5 Wrong Marks : 1
Question Key Details :

Key	Value
Comprehension	MCQ

किसी कोड में FOOTBALL को UPPGMBMC के रूप में लिखा गया। ALIGATOR को इसी प्रकार के कोड में किस प्रकार लिखेंगे?

1. HMJC SUPC
2. HMJA SUPA
3. HMJBSUPB
4. HMIDSUPD


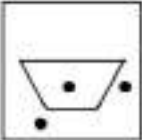
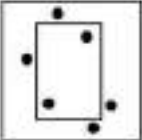

Options :

485584153697. 1
485584153698. 2
485584153699. 3
485584153700. 4

Question Number : 1196 Question Id : 48558438426 Question Type : MCQ Option Shuffling : No Is Question Mandatory : No Calculator : None
Response Time : N.A Think Time : N.A Minimum Instruction Time : 0
Correct Marks : 5 Wrong Marks : 1
Question Key Details :

Key	Value
Comprehension	MCQ

Choose the figure which is different from rest

1. 
2. 
3. 
4. 

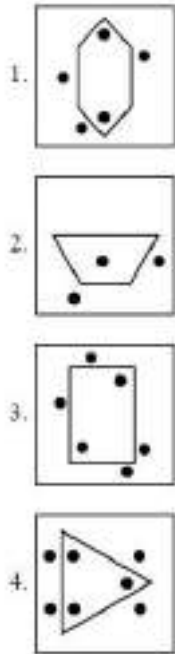
Options :

485584153701. 1
485584153702. 2
485584153703. 3

Question Number : 1196 Question Id : 48558438426 Question Type : MCQ Option Shuffling : No Is Question Mandatory : No Calculator : None
 Response Time : N.A Think Time : N.A Minimum Instruction Time : 0
 Correct Marks : 5 Wrong Marks : 1
 Question Key Details :

Key	Value
Comprehension	MCQ

उस चित्र का चयन कीजिए जो अन्य से भिन्न है।



Options :

485584153701. 1

485584153702. 2

485584153703. 3

485584153704. 4

Question Number : 1197 Question Id : 48558438427 Question Type : MCQ Option Shuffling : No Is Question Mandatory : No Calculator : None
 Response Time : N.A Think Time : N.A Minimum Instruction Time : 0
 Correct Marks : 5 Wrong Marks : 1
 Question Key Details :

Key	Value
Comprehension	MCQ

A, the son-in-law of B, is the brother-in-law of C who is the brother of D. How is C related to B.

1. Cousin

2. Son

3. Brother-in-law

4. Father

Options :

485584153705. 1

485584153706. 2

485584153707. 3

485584153708. 4

Question Number : 1197 Question Id : 48558438427 Question Type : MCQ Option Shuffling : No Is Question Mandatory : No Calculator : None
Response Time : N.A Think Time : N.A Minimum Instruction Time : 0

Correct Marks : 5 Wrong Marks : 1

Question Key Details :

Key	Value
Comprehension	MCQ

A, B का दामाद है और C का जीजा है जो D का भाई है। C का B के साथ क्या संबंध है।

1. चचेरा भाई
2. बेटा
3. साला
4. पिता

Options :

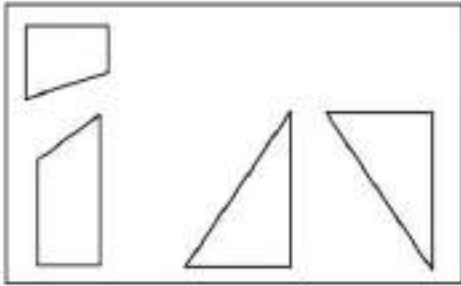
485584153705. 1
485584153706. 2
485584153707. 3
485584153708. 4

Question Number : 1198 Question Id : 48558438428 Question Type : MCQ Option Shuffling : No Is Question Mandatory : No Calculator : None
Response Time : N.A Think Time : N.A Minimum Instruction Time : 0

Correct Marks : 5 Wrong Marks : 1

Question Key Details :

Key	Value
Comprehension	MCQ



Which of the following includes all the four shapes given in the above figure :

- 1.
- 2.
- 3.
- 4.

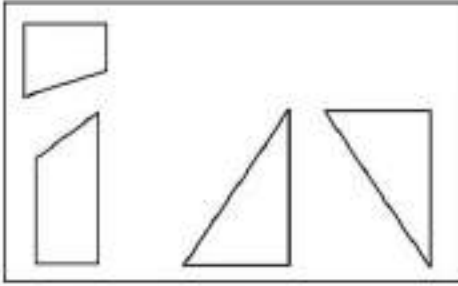
Options :

- 485584153709. 1
- 485584153710. 2
- 485584153711. 3
- 485584153712. 4

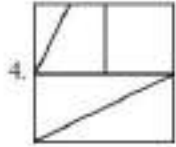
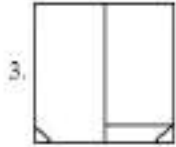
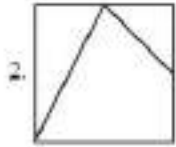
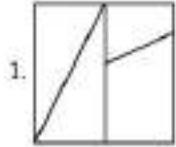
Question Number : 1198 Question Id : 48558438428 Question Type : MCQ Option Shuffling : No Is Question Mandatory : No Calculator : None
 Response Time : N.A Think Time : N.A Minimum Instruction Time : 0
 Correct Marks : 5 Wrong Marks : 1

Question Key Details :

Key	Value
Comprehension	MCQ



निम्नलिखित में से सही विकल्प चयन कीजिए जिसमें उपरोक्त चित्र की सभी 4 संरचनाएँ हो :



Options :

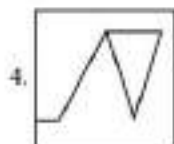
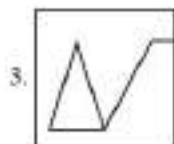
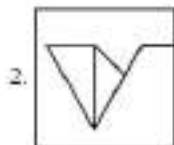
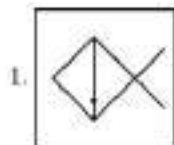
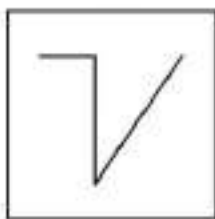
- 485584153709. 1
- 485584153710. 2
- 485584153711. 3
- 485584153712. 4

Question Number : 1199 Question Id : 48558438429 Question Type : MCQ Option Shuffling : No Is Question Mandatory : No Calculator : None
 Response Time : N.A Think Time : N.A Minimum Instruction Time : 0
 Correct Marks : 5 Wrong Marks : 1

Question Key Details :

Key	Value
Comprehension	MCQ

Find the figure 'X' which is embedded in the following alternative:



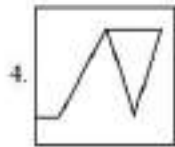
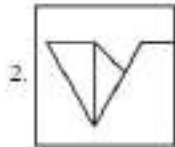
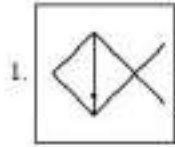
Options :

- 485584153713. 1
- 485584153714. 2
- 485584153715. 3
- 485584153716. 4

Question Number : 1199 Question Id : 48558438429 Question Type : MCQ Option Shuffling : No Is Question Mandatory : No Calculator : None Response Time : N.A Think Time : N.A Minimum Instruction Time : 0 Correct Marks : 5 Wrong Marks : 1 Question Key Details :

Key	Value
Comprehension	MCQ

निम्नलिखित विकल्पों में उस चित्र को देखिए जिसमें 'x' अर्न्तनिहित है:



Options :

485584153713. 1

485584153714. 2

485584153715. 3

485584153716. 4

Question Number : 1200 Question Id : 48558438430 Question Type : MCQ Option Shuffling : No Is Question Mandatory : No Calculator : None

Response Time : N.A Think Time : N.A Minimum Instruction Time : 0

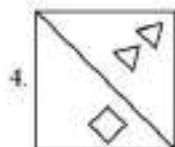
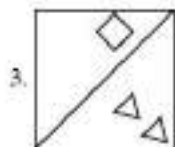
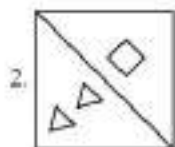
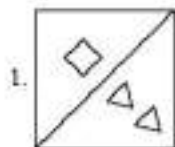
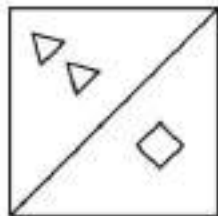
Correct Marks : 5 Wrong Marks : 1

Question Key Details :

Key	Value
Comprehension	MCQ

Choose the correct water image of the problem figure from the options:

Problem figure



Options :

485584153717. 1

485584153718. 2

485584153719. 3

485584153720. 4

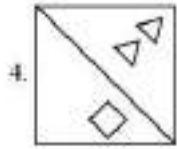
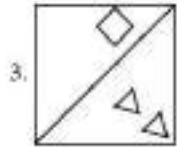
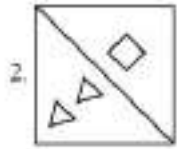
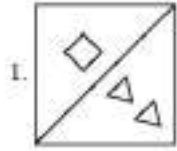
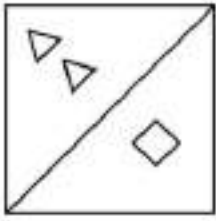
Question Number : 1200. Question Id : 48558438430 Question Type : MCQ Option Shuffling : No Is Question Mandatory : No Calculator : None Response Time : N.A Think Time : N.A Minimum Instruction Time : 0

Correct Marks : 5 Wrong Marks : 1

Question Key Details :

Key	Value
Comprehension	MCQ

दिए गए प्रश्न में सही जल-प्रतिबिंब का चयन कीजिए।



Options :

- 485584153717. 1
- 485584153718. 2
- 485584153719. 3
- 485584153720. 4

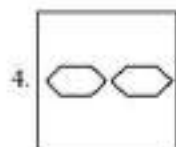
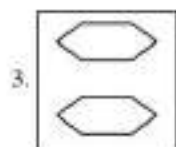
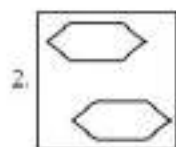
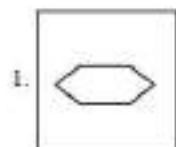
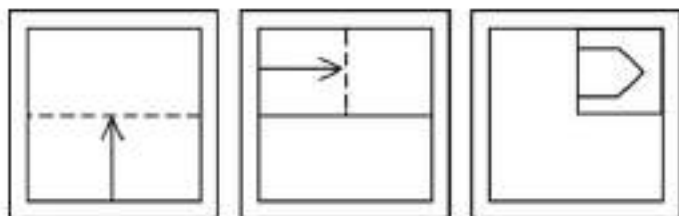
Question Number : 1201 Question Id : 48558438431 Question Type : MCQ Option Shuffling : No Is Question Mandatory : No Calculator : None Response Time : N.A Think Time : N.A Minimum Instruction Time : 0 Correct Marks : 5 Wrong Marks : 1

Question Key Details :

Key	Value
Comprehension	MCQ

A piece of paper is folded and a cut is made as shown below. From the given responses indicate how it will appear when the paper will be opened:

Problem figures:



Options :

- 485584153721. 1
- 485584153722. 2
- 485584153723. 3
- 485584153724. 4

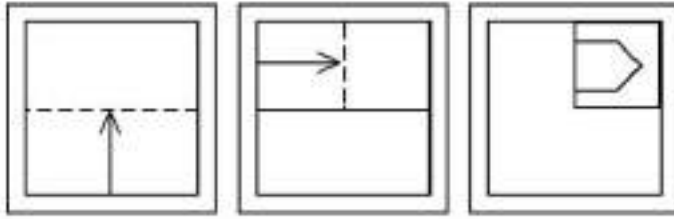
Question Number : 1201 Question Id : 48558438431 Question Type : MCQ Option Shuffling : No Is Question Mandatory : No Calculator : None
 Response Time : N.A Think Time : N.A Minimum Instruction Time : 0

Correct Marks : 5 Wrong Marks : 1

Question Key Details :

Key	Value
Comprehension	MCQ

एक कागज के टुकड़े को मोड़ा गया और एक कट बनाया गया है जैसा कि नीचे दिखाया गया है। दिए गए उत्तरों से इंगित करें कि जब कागज खोला जाएगा तो यह कैसा दिखाई देगा।



- 1.
- 2.
- 3.
- 4.

Options :

485584153721. 1

485584153722. 2

485584153723. 3

485584153724. 4

Question Number : 1202 Question Id : 48558438432 Question Type : MCQ Option Shuffling : No Is Question Mandatory : No Calculator : None Response Time : N.A Think Time : N.A Minimum Instruction Time : 0

Correct Marks : 5 Wrong Marks : 1

Question Key Details :

Key	Value
Comprehension	MCQ

Given below are two statements: one is labelled as Assertion A and the other is labelled as Reason R

Assertion A: Hot air balloon rises up in sky, because hot air is less dense than cold air.

Reason R: Volume of a gas decreases on heating.

In the light of the above statements, choose the **most appropriate** answer from the options given below

1. Both A and R are correct and R is the correct explanation of A
2. Both A and R are correct but R is NOT the correct explanation of A
3. A is correct but R is not correct
4. A is not correct but R is correct

Options :

485584153725. 1
485584153726. 2
485584153727. 3
485584153728. 4

Question Number : 1202 **Question Id :** 48558438432 **Question Type :** MCQ **Option Shuffling :** No **Is Question Mandatory :** No **Calculator :** None
Response Time : N.A **Think Time :** N.A **Minimum Instruction Time :** 0

Correct Marks : 5 **Wrong Marks :** 1

Question Key Details :

Key	Value
Comprehension	MCQ

नीचे दो कथन दिए गए हैं: एक अभिकथन (ASSERTION A) के रूप में लिखित है तो दूसरा उसके कारण (REASON R) के रूप में,

अभिकथन A : गर्म हवा का गुब्बारा ऊपर उठता है, क्योंकि ठंडी हवा की तुलना में गर्म हवा कम घन होती है।

कारण R : गर्म करने पर गैस का आयतन घटता है।

उपरोक्त कथन के अंतर्गत में, नीचे दिए गए विकल्पों में से सबसे उपयुक्त उत्तर का चयन कीजिए

1. A और R दोनों सही हैं और R, A की सही व्याख्या है
2. A और R दोनों सही हैं और R, A की सही व्याख्या नहीं है
3. A सही है लेकिन R गलत है
4. A गलत है लेकिन R सही है

Options :

485584153725. 1
485584153726. 2
485584153727. 3
485584153728. 4

Question Number : 1203 **Question Id :** 48558438433 **Question Type :** MCQ **Option Shuffling :** No **Is Question Mandatory :** No **Calculator :** None
Response Time : N.A **Think Time :** N.A **Minimum Instruction Time :** 0

Correct Marks : 5 **Wrong Marks :** 1

Question Key Details :

Key	Value
Comprehension	MCQ

Who scored the highest among P, Q, R, S and T?

Statement I : Q scored more than S, but not much as R.

Statement II : T scored more than R, but not more than P.

1. Statement I alone is sufficient, but statement II is not sufficient.
2. Statement II alone is sufficient, but statement I is not sufficient.
3. Both statements together are sufficient, but neither statement is alone sufficient.
4. Each statement alone is sufficient.

Options :

485584153729. 1

485584153730. 2

485584153731. 3

485584153732. 4

Question Number : 1203 Question Id : 48558438433 Question Type : MCQ Option Shuffling : No Is Question Mandatory : No Calculator : None Response Time : N.A Think Time : N.A Minimum Instruction Time : 0

Correct Marks : 5 Wrong Marks : 1

Question Key Details :

Key	Value
Comprehension	MCQ

नीचे दो कथन दिए गए हैं:

P, Q, R, S और T में किसने सर्वाधिक अंक प्राप्त किए :

कथन I : Q, S से ज्यादा अंक प्राप्त किए हैं लेकिन R के जितना नहीं।

कथन II : T, R से ज्यादा अंक प्राप्त किए हैं लेकिन P के जितना नहीं।

उपरोक्त कथन के अलावा में, नीचे दिए गए विकल्पों में से सबसे उपयुक्त उत्तर का चयन कीजिए।

1. कथन I अकेला पर्याप्त है, लेकिन कथन II पर्याप्त नहीं है।
2. कथन I पर्याप्त नहीं है, लेकिन कथन II अकेला पर्याप्त है।
3. दोनों कथन साथ पर्याप्त हैं, लेकिन अकेले कोई भी कथन पर्याप्त नहीं है।
4. प्रत्येक कथन अकेला पर्याप्त है।

Options :

485584153729. 1

485584153730. 2

485584153731. 3

485584153732. 4

Question Number : 1204 Question Id : 48558438434 Question Type : MCQ Option Shuffling : No Is Question Mandatory : No Calculator : None Response Time : N.A Think Time : N.A Minimum Instruction Time : 0

Correct Marks : 5 Wrong Marks : 1

Question Key Details :

Key	Value
Comprehension	MCQ

A flight from Delhi to Mumbai leaves every 5 hours. At the evening counter, it clarify that flight took off 25 minutes ago. If the time now is 10:40 am, what is the time for the next flight?

1. 3:15 pm
2. 3:15 am
3. 2:10 pm
4. 2:10 am

Options :

485584153733. 1
485584153734. 2
485584153735. 3
485584153736. 4

Question Number : 1204 Question Id : 48558438434 Question Type : MCQ Option Shuffling : No Is Question Mandatory : No Calculator : None Response Time : N.A Think Time : N.A Minimum Instruction Time : 0

Correct Marks : 5 Wrong Marks : 1

Question Key Details :

Key	Value
Comprehension	MCQ

दिल्ली से मुंबई के लिए फ्लाइट (उड़ान) हर 5 घंटे में कूटती है। पूछताछ काउंटर पर, यह स्पष्ट है कि उड़ान 25 मिनट पहले भरी है। यदि अभी समय 10:40 am है, तो अगली उड़ान का समय क्या होगा

1. 3:15 pm
2. 3:15 am
3. 2:10 pm
4. 2:10 am

Options :

485584153733. 1
485584153734. 2
485584153735. 3
485584153736. 4

Question Number : 1205 Question Id : 48558438435 Question Type : MCQ Option Shuffling : No Is Question Mandatory : No Calculator : None Response Time : N.A Think Time : N.A Minimum Instruction Time : 0

Correct Marks : 5 Wrong Marks : 1

Question Key Details :

Key	Value
Comprehension	MCQ

Given below are two statements: one is labelled as Assertion A and the other is labelled as Reason R

2, 6, 20, 42, 110, 156, 272-----

Assertion A: In the above number series the number is subtracted from the square of the same prime number.

Reason R: The difference between the two consecutive numbers of the series are multiple of even numbers only.

In the light of the above statements, choose the most appropriate answer from the options given below

1. Both A and R are correct and R is the correct explanation of A.
2. Both A and R are correct but R is NOT the correct explanation of A
3. A is correct but R is false
4. A is false but R is true

Options :

485584153737. 1
485584153738. 2
485584153739. 3
485584153740. 4

Question Number : 1205 Question Id : 48558438435 Question Type : MCQ Option Shuffling : No Is Question Mandatory : No Calculator : None Response Time : N.A Think Time : N.A Minimum Instruction Time : 0

Correct Marks : 5 Wrong Marks : 1

Question Key Details :

Key	Value
Comprehension	MCQ

नीचे दो कथन दिए गए हैं: एक अभिकथन (ASSERTION A) के रूप में लिखित है तो दूसरा उसके कारण (REASON R) के रूप में:

2, 6, 20, 42, 110, 156, 272-----

अभिकथन A : उपरोक्त संख्या श्रृंखला में, संख्या को उसी अभाज्य संख्या के वर्ग से घटाया जाता है।

कारण R : श्रृंखला की दो लगातार संख्याओं के बीच अंतर केवल सम संख्या का गुणक है।

उपरोक्त कथन के अंतर्गत में, नीचे दिए गए विकल्पों में से सबसे उपयुक्त उत्तर का चयन कीजिए

1. A और R दोनों सही हैं और R, A की सही व्याख्या है
2. A और R दोनों सही हैं और R, A की सही व्याख्या नहीं है
3. A सही है लेकिन R गलत है
4. A गलत है लेकिन R सही है

Options :

485584153737. 1
485584153738. 2
485584153739. 3
485584153740. 4

Question Number : 1206 Question Id : 48558438436 Question Type : MCQ Option Shuffling : No Is Question Mandatory : No Calculator : None Response Time : N.A Think Time : N.A Minimum Instruction Time : 0

Correct Marks : 5 Wrong Marks : 1

Question Key Details :

Key	Value
Comprehension	MCQ

Study the following information carefully and answer the question given below:

Following are the conditions for selecting Manager in an organisation

The candidate must

- I. be not less than 25 yr and not more than 30 yr as on 1.1.2020
- II. be graduate at least 65% marks.
- III. be ready to pay ₹70,000 as security deposit
- IV. have secured at least 50% marks in the selection exam.
- V. have secured at least 55% marks in personal interview.

In the case of a candidate who has satisfied all the above conditions except

- 1.. at (II) above, but has secured at least 70% marks in the post graduation, the case is referred to Director-personnel.
2. at (III) above, but is ready to sign a bond for one year, the case is to be referred to HOD-personnel.

Anrita was born on 15th July, 1992. She has secured 66% marks in graduation and 71% marks in post-graduation. She is ready to pay ₹70,000 as security deposit. She has also secured 50% marks in the selection Examination.

1. If the candidate is to be selected.
2. if the candidate is not be selected.
3. if the data provided is not adequate to take a decision.
4. if the case is to be referred to the Director-personnel.

Options :

485584153741. 1
485584153742. 2
485584153743. 3
485584153744. 4

Question Number : 1206 Question Id : 48558438436 Question Type : MCQ Option Shuffling : No Is Question Mandatory : No Calculator : None Response Time : N.A Think Time : N.A Minimum Instruction Time : 0

Correct Marks : 5 Wrong Marks : 1

Question Key Details :

Key	Value
Comprehension	MCQ

दिए गए सूचना को ध्यानपूर्वक पढ़िए और नीचे दिये गये प्रश्नों के उत्तर दीजिए

एक संगठन में प्रबंधक के चयन के लिए निम्नलिखित शर्तें हैं

उम्मीदवार

- I. 1.1.2020 को 25 वर्ष से कम नहीं होना चाहिए और 30 साल से ज्यादा नहीं होना चाहिए।
- II. कम से कम 65% के साथ स्नातक होना चाहिए।
- III. सुरक्षा जमा के रूप में ₹70,000 का भुगतान करने को तैयार हो।
- IV. चयन परीक्षा में कम से कम 50% अंक प्राप्त किया हो।
- V. व्यक्तिगत साक्षात्कार में कम से कम 35% अंक प्राप्त होना चाहिए।

एक उम्मीदवार के मामले जो सभी शर्तों को पूर्ण करता है सिवाय,

1. उपरोक्त (II) में, लेकिन वह परास्तानक में कम से कम 70% अंक प्राप्त किया हो, मामले को निदेशक कार्मिक के पास भेजा जाएगा।
2. उपरोक्त (III) में, लेकिन एक वर्ष के लिए बॉन्ड पर हस्ताक्षर करने को तैयार है, मामले को एच ओ डी कार्मिक के पास भेजा जा जाएगा।

अंरीता का जन्म 15 जुलाई 1992 को हुआ था। उसने स्नातक में 60% अंक तथा परास्नातक में 77% अंक अर्जित किए। वह ₹70,000 सुरक्षा जमा के रूप में भुगतान के लिए तैयार है उसने चयन परीक्षा में 50% अंक भी अर्जित किए।

1. यदि उम्मीदवार को चयन करना चाहिए।
2. यदि उम्मीदवार को नहीं चयन करना चाहिए।
3. यदि जानकारी अंकित निर्णय के लिए अपर्याप्त है।
4. यदि मामले को निदेशक कार्मिक का निर्दिष्ट करना चाहिए।

Options :

485584153741. 1
485584153742. 2
485584153743. 3
485584153744. 4

Question Number : 1207 Question Id : 48558438437 Question Type : MCQ Option Shuffling : No Is Question Mandatory : No Calculator : None Response Time : N.A Think Time : N.A Minimum Instruction Time : 0

Correct Marks : 5 Wrong Marks : 1

Question Key Details :

Key	Value
Comprehension	MCQ

Potato: Carrot: Radish

1. Spinach
2. Sesame
3. Tomato
4. Groundnut

Options :

485584153745. 1
485584153746. 2
485584153747. 3
485584153748. 4

Question Number : 1207 Question Id : 48558438437 Question Type : MCQ Option Shuffling : No Is Question Mandatory : No Calculator : None Response Time : N.A Think Time : N.A Minimum Instruction Time : 0

Correct Marks : 5 Wrong Marks : 1

Question Key Details :

Key	Value
Comprehension	MCQ

आलू: गाजर: मूली

1. पालक
2. तिल
3. टमाटर
4. मूंगफली

Options :

485584153745. 1

485584153746. 2

485584153747. 3

485584153748. 4

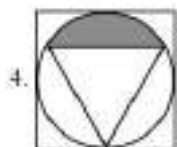
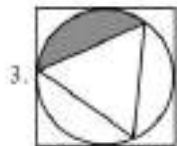
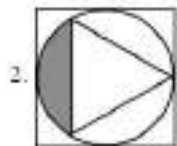
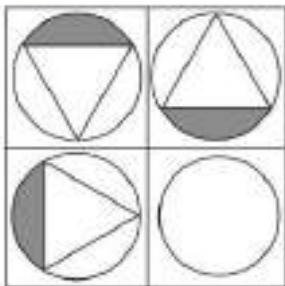
Question Number : 1208 Question Id : 48558438438 Question Type : MCQ Option Shuffling : No Is Question Mandatory : No Calculator : None
Response Time : N.A Think Time : N.A Minimum Instruction Time : 0

Correct Marks : 5 Wrong Marks : 1

Question Key Details :

Key	Value
Comprehension	MCQ

Problem figure



Options :

485584153749. 1

485584153750. 2

485584153751. 3

485584153752. 4

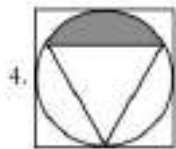
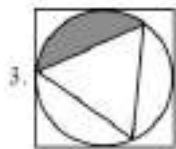
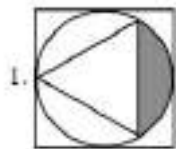
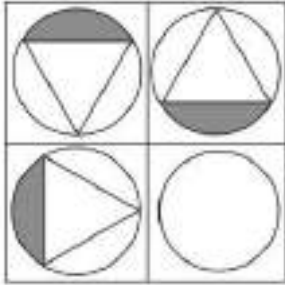
Question Number : 1208 Question Id : 48558438438 Question Type : MCQ Option Shuffling : No Is Question Mandatory : No Calculator : None Response Time : N.A Think Time : N.A Minimum Instruction Time : 0

Correct Marks : 5 Wrong Marks : 1

Question Key Details :

Key	Value
Comprehension	MCQ

समस्या आकृति



Options :

485584153749. 1

485584153750. 2

485584153751. 3

485584153752. 4

Question Number : 1209 Question Id : 48558438439 Question Type : MCQ Option Shuffling : No Is Question Mandatory : No Calculator : None Response Time : N.A Think Time : N.A Minimum Instruction Time : 0

Correct Marks : 5 Wrong Marks : 1

Question Key Details :

Key	Value
Comprehension	MCQ

Choose the right answer on the basis of the following statement and conclusions.

Statement : It is almost impossible to survive and prosper in their world without sacrificing ethics and morality.

Conclusion I : World appreciate some concepts but may not uphold it.

II : Concept or ethics and morality are not practicable in life.

1. Only I follows
2. Only II follows
3. Both I and II follows
4. Neither I nor II follows

Options :

485584153753. 1
485584153754. 2
485584153755. 3
485584153756. 4

Question Number : 1209 Question Id : 48558438439 Question Type : MCQ Option Shuffling : No Is Question Mandatory : No Calculator : None

Response Time : N.A Think Time : N.A Minimum Instruction Time : 0

Correct Marks : 5 Wrong Marks : 1

Question Key Details :

Key	Value
Comprehension	MCQ

दिए गए कथन और निष्कर्ष के आधार पर सही उत्तर का चयन कीजिए:

कथन : आचार और नैतिकता का त्याग किए बिना विश्व में जीवित रहना और समृद्ध होना लगभग असंभव है।

निष्कर्ष I : विश्व कुछ अवधारणाओं की सराहना करता है, लेकिन इसे कायम नहीं रख सकता है।

II : आचार और नैतिकता की अवधारणा जीवन में व्यवहारिक नहीं है।

1. केवल I अनुसरण
2. केवल II अनुसरण
3. I और II दोनों अनुसरण
4. न तो I न तो II अनुसरण

Options :

485584153753. 1
485584153754. 2
485584153755. 3
485584153756. 4

Question Number : 1210 Question Id : 48558438440 Question Type : MCQ Option Shuffling : No Is Question Mandatory : No Calculator : None

Response Time : N.A Think Time : N.A Minimum Instruction Time : 0

Correct Marks : 5 Wrong Marks : 1

Question Key Details :

Key	Value
Comprehension	MCQ

Statement: "Do not lean out of the moving train". - A warning in the railway compartment.

Assumptions:

- I. Such warning will be some effect.
 - II. Leaning out of the moving train is dangerous.
 - III. It is duty of railway authorities to take care of passengers safety
1. Only I and II are implicit.
 2. Only II and III implicit.
 3. Only one (I) and III are implicit.
 4. I, II, III implicit

Options :

485584153757. 1
485584153758. 2
485584153759. 3
485584153760. 4

Question Number : 1210 **Question Id :** 48558438440 **Question Type :** MCQ **Option Shuffling :** No **Is Question Mandatory :** No **Calculator :** None
Response Time : N.A **Think Time :** N.A **Minimum Instruction Time :** 0

Correct Marks : 5 **Wrong Marks :** 1

Question Key Details :

Key	Value
Comprehension	MCQ

कथन: चलती ट्रेन से बाहर न झुके. रेल के बोगी में चेतावनी

पूर्वधारणाएं:

- I. ऐसी चेतावनी का कुछ असर होगा
 - II. चलती ट्रेन में बाहर की तरफ झुकना खतरनाक है
 - III. यह रेलवे अधिकारियों का कर्तव्य है कि यात्री की सुरक्षा का ध्यान रखें
1. केवल I और II दोनों अंतर्निहित हैं
 2. केवल II और III दोनों अंतर्निहित हैं
 3. केवल I और III दोनों अंतर्निहित हैं
 4. I, II और III अंतर्निहित हैं

Options :

485584153757. 1
485584153758. 2
485584153759. 3
485584153760. 4

Question Number : 1211 **Question Id :** 48558438441 **Question Type :** MCQ **Option Shuffling :** No **Is Question Mandatory :** No **Calculator :** None
Response Time : N.A **Think Time :** N.A **Minimum Instruction Time :** 0

Correct Marks : 5 **Wrong Marks :** 1

Question Key Details :

Key	Value
Comprehension	MCQ

How many notes are in the Hindustani Classical music?

1. 5
2. 6
3. 7
4. 8

Options :

485584153761. 1
485584153762. 2
485584153763. 3
485584153764. 4

Question Number : 1211 Question Id : 48558438441 Question Type : MCQ Option Shuffling : No Is Question Mandatory : No Calculator : None Response Time : N.A Think Time : N.A Minimum Instruction Time : 0 Correct Marks : 5 Wrong Marks : 1

Question Key Details :

Key	Value
Comprehension	MCQ

हिन्दुस्तानी शास्त्रीय संगीत में कितने स्वर होते हैं?

1. 5
2. 6
3. 7
4. 8

Options :

485584153761. 1
485584153762. 2
485584153763. 3
485584153764. 4

Question Number : 1212 Question Id : 48558438442 Question Type : MCQ Option Shuffling : No Is Question Mandatory : No Calculator : None Response Time : N.A Think Time : N.A Minimum Instruction Time : 0 Correct Marks : 5 Wrong Marks : 1

Question Key Details :

Key	Value
Comprehension	MCQ

The temple 'Nageshwar' was constructed by?

1. TRAIKUTAKAS
2. RASHTRAKUTAS
3. PRATI HARAS
4. PANDYAS

Options :

485584153765. 1
485584153766. 2
485584153767. 3
485584153768. 4

Question Number : 1212 Question Id : 48558438442 Question Type : MCQ Option Shuffling : No Is Question Mandatory : No Calculator : None
Response Time : N.A Think Time : N.A Minimum Instruction Time : 0

Correct Marks : 5 Wrong Marks : 1

Question Key Details :

Key	Value
Comprehension	MCQ

नागेश्वर मंदिर किसके द्वारा बनवाया गया था?

1. त्रिकुटाकस
2. राष्ट्रकूट
3. प्रतिहार
4. पांड्या

Options :

485584153765. 1
485584153766. 2
485584153767. 3
485584153768. 4

Question Number : 1213 Question Id : 48558438443 Question Type : MCQ Option Shuffling : No Is Question Mandatory : No Calculator : None
Response Time : N.A Think Time : N.A Minimum Instruction Time : 0

Correct Marks : 5 Wrong Marks : 1

Question Key Details :

Key	Value
Comprehension	MCQ

What was the Early-Medieval period?

1. 650- 1206
2. 750- 1306
3. 500- 1000
4. 750- 1206

Options :

485584153769. 1
485584153770. 2
485584153771. 3
485584153772. 4

Question Number : 1213 Question Id : 48558438443 Question Type : MCQ Option Shuffling : No Is Question Mandatory : No Calculator : None
Response Time : N.A Think Time : N.A Minimum Instruction Time : 0

Correct Marks : 5 Wrong Marks : 1

Question Key Details :

Key	Value
Comprehension	MCQ

प्रारंभिक मध्यकाल अवधि क्या थी-

1. 650- 1206
2. 750- 1306
3. 500- 1000
4. 750- 1206

Options :

- 485584153769. 1
- 485584153770. 2
- 485584153771. 3
- 485584153772. 4

Question Number : 1214 Question Id : 48558438444 Question Type : MCQ Option Shuffling : No Is Question Mandatory : No Calculator : None
Response Time : N.A Think Time : N.A Minimum Instruction Time : 0
Correct Marks : 5 Wrong Marks : 1

Question Key Details :

Key	Value
Comprehension	MCQ

The second Maratha War was fought from-

- 1. 1775-1782 A.D.
- 2. 1785- 1790 A.D.
- 3. 1803- 1806 A.D.
- 4. 1817- 1818 A.D.

Options :

- 485584153773. 1
- 485584153774. 2
- 485584153775. 3
- 485584153776. 4

Question Number : 1214 Question Id : 48558438444 Question Type : MCQ Option Shuffling : No Is Question Mandatory : No Calculator : None
Response Time : N.A Think Time : N.A Minimum Instruction Time : 0
Correct Marks : 5 Wrong Marks : 1

Question Key Details :

Key	Value
Comprehension	MCQ

_____ द्वारा मराठा युद्ध कब से लड़ा गया था

- 1. 1775-1782 ईस्वी
- 2. 1785- 1790 ईस्वी
- 3. 1803- 1806 ईस्वी
- 4. 1817- 1818 ईस्वी

Options :

- 485584153773. 1
- 485584153774. 2
- 485584153775. 3
- 485584153776. 4

Question Number : 1215 Question Id : 48558438445 Question Type : MCQ Option Shuffling : No Is Question Mandatory : No Calculator : None
Response Time : N.A Think Time : N.A Minimum Instruction Time : 0
Correct Marks : 5 Wrong Marks : 1

Question Key Details :

Key	Value
Comprehension	MCQ

1 atm (Atmospheric Pressure) is equal to:

1. $1.01 \times 10^5 \text{ N/m}^2$
2. $1.01 \times 10^{10} \text{ N/m}^2$
3. $6.67 \times 10^5 \text{ N/m}^2$
4. 10^7 N/m^2

Options :

485584153777. 1
485584153778. 2
485584153779. 3
485584153780. 4

Question Number : 1215 Question Id : 48558438445 Question Type : MCQ Option Shuffling : No Is Question Mandatory : No Calculator : None Response Time : N.A Think Time : N.A Minimum Instruction Time : 0 Correct Marks : 5 Wrong Marks : 1

Question Key Details :

Key	Value
Comprehension	MCQ

1 एटीएम (वायुमंडलीय दाब) के समतुल्य है

1. $1.01 \times 10^5 \text{ N/m}^2$
2. $1.01 \times 10^{10} \text{ N/m}^2$
3. $6.67 \times 10^5 \text{ N/m}^2$
4. 10^7 N/m^2

Options :

485584153777. 1
485584153778. 2
485584153779. 3
485584153780. 4

Question Number : 1216 Question Id : 48558438446 Question Type : MCQ Option Shuffling : No Is Question Mandatory : No Calculator : None Response Time : N.A Think Time : N.A Minimum Instruction Time : 0

Correct Marks : 5 Wrong Marks : 1

Question Key Details :

Key	Value
Comprehension	MCQ

Which method will you use to separate Methyl alcohol to acetone?

1. Crystallisation
2. Evaporation
3. Filtration
4. Fractional distillation

Options :

485584153781. 1
485584153782. 2
485584153783. 3
485584153784. 4

Question Number : 1216 Question Id : 48558438446 Question Type : MCQ Option Shuffling : No Is Question Mandatory : No Calculator : None
Response Time : N.A Think Time : N.A Minimum Instruction Time : 0

Correct Marks : 5 Wrong Marks : 1

Question Key Details :

Key	Value
Comprehension	MCQ

मेथिल एक्टोहल से एसिटोन को अलग करने के लिए आप कौन से प्रक्रिया का उपयोग करेंगे?

1. क्रिस्टलीकरण
2. वाष्पीकरण
3. निस्पंदन (छनन)
4. प्रभाजी आसवन

Options :

485584153781. 1
485584153782. 2
485584153783. 3
485584153784. 4

Question Number : 1217 Question Id : 48558438447 Question Type : MCQ Option Shuffling : No Is Question Mandatory : No Calculator : None
Response Time : N.A Think Time : N.A Minimum Instruction Time : 0

Correct Marks : 5 Wrong Marks : 1

Question Key Details :

Key	Value
Comprehension	MCQ

Which of the following is a type of Complex permanent tissue

1. Parenchyma
2. Collenchyma
3. Sclerenchyma
4. Phloem

Options :

485584153785. 1
485584153786. 2
485584153787. 3
485584153788. 4

Question Number : 1217 Question Id : 48558438447 Question Type : MCQ Option Shuffling : No Is Question Mandatory : No Calculator : None
Response Time : N.A Think Time : N.A Minimum Instruction Time : 0

Correct Marks : 5 Wrong Marks : 1

Question Key Details :

Key	Value
Comprehension	MCQ

निम्नलिखित में से कौन-सा एक जटिल स्थायी उत्तक का प्रकार है?

1. पेरेन्काइमा
2. कोलेनकाइमा
3. स्कलेरेन्काइमा
4. फ्लोइड

Options :

485584153785. 1
485584153786. 2
485584153787. 3
485584153788. 4

Question Number : 1218 Question Id : 48558438448 Question Type : MCQ Option Shuffling : No Is Question Mandatory : No Calculator : None Response Time : N.A Think Time : N.A Minimum Instruction Time : 0

Correct Marks : 5 Wrong Marks : 1

Question Key Details :

Key	Value
Comprehension	MCQ

Who among the following invented the Universal Serial Bus (USB)?

1. Sundaram Pichai
2. Ajay V. Bhatt
3. Pranjal Mistri
4. Satyam Nadela

Options :

485584153789. 1
485584153790. 2
485584153791. 3
485584153792. 4

Question Number : 1218 Question Id : 48558438448 Question Type : MCQ Option Shuffling : No Is Question Mandatory : No Calculator : None Response Time : N.A Think Time : N.A Minimum Instruction Time : 0

Correct Marks : 5 Wrong Marks : 1

Question Key Details :

Key	Value
Comprehension	MCQ

निम्नलिखित में से किसने यूनिवर्सल सीरियल बस (BUS) की खोज की?

1. सुंदरम पिचाई
2. अजय वी. भट्ट
3. प्रनल मिस्त्री
4. सत्यम नडेला

Options :

485584153789. 1
485584153790. 2
485584153791. 3
485584153792. 4

Question Number : 1219 Question Id : 48558438449 Question Type : MCQ Option Shuffling : No Is Question Mandatory : No Calculator : None
Response Time : N.A Think Time : N.A Minimum Instruction Time : 0
Correct Marks : 5 Wrong Marks : 1

Question Key Details :

Key	Value
Comprehension	MCQ

Which country will host National Delphic Games for Arts and cultures in 2023?

1. France
2. India
3. USA
4. China

Options :

485584153793. 1
485584153794. 2
485584153795. 3
485584153796. 4

Question Number : 1219 Question Id : 48558438449 Question Type : MCQ Option Shuffling : No Is Question Mandatory : No Calculator : None
Response Time : N.A Think Time : N.A Minimum Instruction Time : 0
Correct Marks : 5 Wrong Marks : 1

Question Key Details :

Key	Value
Comprehension	MCQ

2023 में कला और संस्कृति के लिए राष्ट्रीय डेलफिक खेल कौन सा देश मेजबानी करेगा

1. फ्रांस
2. भारत
3. यू. एस. ए
4. चीन

Options :

485584153793. 1
485584153794. 2
485584153795. 3
485584153796. 4

Question Number : 1220 Question Id : 48558438450 Question Type : MCQ Option Shuffling : No Is Question Mandatory : No Calculator : None
Response Time : N.A Think Time : N.A Minimum Instruction Time : 0
Correct Marks : 5 Wrong Marks : 1

Question Key Details :

Key	Value
Comprehension	MCQ

What is estimated GDP growth of India In 2022-23 as per NSO advances estimates?

1. 6%
2. 7%
3. 8%
4. 9%

Options :

485584153797. 1
485584153798. 2
485584153799. 3
485584153800. 4

Question Number : 1220 Question Id : 48558438450 Question Type : MCQ Option Shuffling : No Is Question Mandatory : No Calculator : None Response Time : N.A Think Time : N.A Minimum Instruction Time : 0

Correct Marks : 5 Wrong Marks : 1

Question Key Details :

Key	Value
Comprehension	MCQ

एन. एस. ओ के पहला अग्रिम अनुमान के अनुसार, 2022-23 में भारत की जी. डी. पी वृद्धि का क्या अनुमान है?

1. 6%
2. 7%
3. 8%
4. 9%

Options :

485584153797. 1
485584153798. 2
485584153799. 3
485584153800. 4

Question Number : 1221 Question Id : 48558438451 Question Type : MCQ Option Shuffling : No Is Question Mandatory : No Calculator : None Response Time : N.A Think Time : N.A Minimum Instruction Time : 0

Correct Marks : 5 Wrong Marks : 1

Question Key Details :

Key	Value
Comprehension	MCQ

Where is the World Cup Cricket 2023 scheduled to be held?

1. England
2. South Africa
3. Australia
4. India

Options :

485584153801. 1
485584153802. 2
485584153803. 3
485584153804. 4

Question Number : 1221 Question Id : 48558438451 Question Type : MCQ Option Shuffling : No Is Question Mandatory : No Calculator : None

Response Time : N.A Think Time : N.A Minimum Instruction Time : 0

Correct Marks : 5 Wrong Marks : 1

Question Key Details :

Key	Value
Comprehension	MCQ

विश्व कप क्रिकेट 2023, को कहीं आयोजित किया जाना निर्धारित है

1. इंग्लैंड
2. दक्षिण अफ्रिका
3. आस्ट्रेलिया
4. भारत

Options :

485584153801. 1

485584153802. 2

485584153803. 3

485584153804. 4

Question Number : 1222 Question Id : 48558438452 Question Type : MCQ Option Shuffling : No Is Question Mandatory : No Calculator : None

Response Time : N.A Think Time : N.A Minimum Instruction Time : 0

Correct Marks : 5 Wrong Marks : 1

Question Key Details :

Key	Value
Comprehension	MCQ

ISRO chairperson S. Somnath has announced in May 2022 to launch Venus Mission by:

1. 2023
2. 2024
3. 2025
4. 2027

Options :

485584153805. 1

485584153806. 2

485584153807. 3

485584153808. 4

Question Number : 1222 Question Id : 48558438452 Question Type : MCQ Option Shuffling : No Is Question Mandatory : No Calculator : None

Response Time : N.A Think Time : N.A Minimum Instruction Time : 0

Correct Marks : 5 Wrong Marks : 1

Question Key Details :

Key	Value
Comprehension	MCQ

इसरो अध्यक्ष एस. सोमनाथ मई 2022 में शुक्र मिशन को कब लॉन्च करने की घोषणा की

1. 2023
2. 2024
3. 2025
4. 2027

Options :

- 485584153805. 1
- 485584153806. 2
- 485584153807. 3
- 485584153808. 4

Question Number : 1223 Question Id : 48558438453 Question Type : MCQ Option Shuffling : No Is Question Mandatory : No Calculator : None
Response Time : N.A Think Time : N.A Minimum Instruction Time : 0

Correct Marks : 5 Wrong Marks : 1

Question Key Details :

Key	Value
Comprehension	MCQ

Which of the following countries share longest border (lengthwise)with India?

1. Pakistan
2. Bangladesh
3. China
4. Nepal

Options :

- 485584153809. 1
- 485584153810. 2
- 485584153811. 3
- 485584153812. 4

Question Number : 1223 Question Id : 48558438453 Question Type : MCQ Option Shuffling : No Is Question Mandatory : No Calculator : None

Response Time : N.A Think Time : N.A Minimum Instruction Time : 0

Correct Marks : 5 Wrong Marks : 1

Question Key Details :

Key	Value
Comprehension	MCQ

निम्नलिखित में से भारत के साथ (लंबाई में) सबसे लंबी सीमा साझा करने वाला देश है

1. पाकिस्तान
2. बांग्लादेश
3. चीन
4. नेपाल

Options :

- 485584153809. 1
- 485584153810. 2
- 485584153811. 3
- 485584153812. 4

Question Number : 1224 Question Id : 48558438454 Question Type : MCQ Option Shuffling : No Is Question Mandatory : No Calculator : None

Response Time : N.A Think Time : N.A Minimum Instruction Time : 0

Correct Marks : 5 Wrong Marks : 1

Question Key Details :

Key	Value
Comprehension	MCQ

Which of the following states does not share boundary with Bhutan?

1. West Bengal
2. Assam
3. Sikkim
4. Meghalaya

Options :

485584153813. 1
485584153814. 2
485584153815. 3
485584153816. 4

Question Number : 1224 Question Id : 48558438454 Question Type : MCQ Option Shuffling : No Is Question Mandatory : No Calculator : None Response Time : N.A Think Time : N.A Minimum Instruction Time : 0 Correct Marks : 5 Wrong Marks : 1

Question Key Details :

Key	Value
Comprehension	MCQ

निम्नलिखित राज्यों में से कौन-सा भूटान के साथ सीमा साझा नहीं करता है?

1. पश्चिम बंगाल
2. असम
3. सिक्किम
4. मेघालय

Options :

485584153813. 1
485584153814. 2
485584153815. 3
485584153816. 4

Question Number : 1225 Question Id : 48558438455 Question Type : MCQ Option Shuffling : No Is Question Mandatory : No Calculator : None Response Time : N.A Think Time : N.A Minimum Instruction Time : 0 Correct Marks : 5 Wrong Marks : 1

Question Key Details :

Key	Value
Comprehension	MCQ

The Hindi term for Geography is 'BHUGOL'. It was first coined by which famous ancient Indian geographer?

1. Varah Mihir
2. Brahmagupta
3. Aryabhata
4. Bhaskracharya

Options :

485584153817. 1
485584153818. 2
485584153819. 3
485584153820. 4

Question Number : 1225 Question Id : 48558438455 Question Type : MCQ Option Shuffling : No Is Question Mandatory : No Calculator : None
Response Time : N.A Think Time : N.A Minimum Instruction Time : 0

Correct Marks : 5 Wrong Marks : 1

Question Key Details :

Key	Value
Comprehension	MCQ

ज्योग्राफी के लिए 'भूगोल' हिन्दी शब्द है। यह किस प्राचीन भारतीय भूगोलवेत्ता के द्वारा पहली बार प्रतिपादित किया गया?

1. वराहमिहिर
2. ब्रह्मगुप्त
3. आर्यभट्ट
4. भास्कराचार्य

Options :

485584153817. 1
485584153818. 2
485584153819. 3
485584153820. 4

Question Number : 1226 Question Id : 48558438456 Question Type : MCQ Option Shuffling : No Is Question Mandatory : No Calculator : None
Response Time : N.A Think Time : N.A Minimum Instruction Time : 0

Correct Marks : 5 Wrong Marks : 1

Question Key Details :

Key	Value
Comprehension	MCQ

As per the data (2019-20), which country is the largest producer of milk:

1. Denmark
2. China
3. USA
4. India

Options :

485584153821. 1
485584153822. 2
485584153823. 3
485584153824. 4

Question Number : 1226 Question Id : 48558438456 Question Type : MCQ Option Shuffling : No Is Question Mandatory : No Calculator : None
Response Time : N.A Think Time : N.A Minimum Instruction Time : 0

Correct Marks : 5 Wrong Marks : 1

Question Key Details :

Key	Value
Comprehension	MCQ

आकड़ा (2019-20) के अनुसार, कौन सा देश दूध उत्पादन में सबसे बड़ा है

1. डेनमार्क
2. चीन
3. यू.एस.ए
4. भारत

Options :

485584153821. 1
485584153822. 2
485584153823. 3
485584153824. 4

Question Number : 1227 Question Id : 48558438457 Question Type : MCQ Option Shuffling : No Is Question Mandatory : No Calculator : None Response Time : N.A Think Time : N.A Minimum Instruction Time : 0 Correct Marks : 5 Wrong Marks : 1

Question Key Details :

Key	Value
Comprehension	MCQ

Given below are two statements:

Statement I: According to the World Inequality Report 2022, in India the top 1% of the population hold more than one-fifth of the total income in 2021 and bottom half just 13%

statement II: According to the World Inequality Report 2022, in India female labour income share is equal to 18% which is significantly lower than the average in Asia.

In the light of above statements, choose the most appropriate answer from the options given below:

1. Both Statement I and Statement II are true
2. Both Statement I and Statement II are false
3. Statement I is true but Statement II is false
4. Statement I is false but Statement II is true

Options :

485584153825. 1
485584153826. 2
485584153827. 3
485584153828. 4

Question Number : 1227 Question Id : 48558438457 Question Type : MCQ Option Shuffling : No Is Question Mandatory : No Calculator : None Response Time : N.A Think Time : N.A Minimum Instruction Time : 0 Correct Marks : 5 Wrong Marks : 1

Question Key Details :

Key	Value
Comprehension	MCQ

नीचे दो कथन दिए गए हैं:

कथन I: विश्व असमानता रिपोर्ट 2022 के अनुसार, भारत में जनसंख्या का शीर्ष 1%, 2021 में कुल राष्ट्रीय आय के एक-पांचवे से अधिक रखता है और निम्नतमस्तर का आधा केवल 13% रखता है।

कथन II: विश्व असमानता रिपोर्ट 2022 के अनुसार, भारत में महिला श्रम की आय का हिस्सा 18% के बराबर है जोकि एशिया में सार्थक रूप से औसत से कम है।

उपरोक्त कथन के अलोक में, नीचे दिए गए विकल्पों में से सबसे उपयुक्त उत्तर का चयन कीजिए

1. कथन I और II दोनों सत्य हैं
2. कथन I और II दोनों असत्य हैं
3. कथन I सत्य है, लेकिन कथन II असत्य है
4. कथन I असत्य है, लेकिन कथन II सत्य है

Options :

485584153825. 1
485584153826. 2
485584153827. 3
485584153828. 4

Question Number : 1228 **Question Id :** 48558438458 **Question Type :** MCQ **Option Shuffling :** No **Is Question Mandatory :** No **Calculator :** None **Response Time :** N.A **Think Time :** N.A **Minimum Instruction Time :** 0

Correct Marks : 5 **Wrong Marks :** 1

Question Key Details :

Key	Value
Comprehension	MCQ

India's overall exports touched all-time high of _____ in April-March 2021-22, jumping 34.50% over the same period last year.

1. USD 599 Billion
2. USD 400.35 Billion
3. USD 669.65 Billion
4. USD 742.25 Billion

Options :

485584153829. 1
485584153830. 2
485584153831. 3
485584153832. 4

Question Number : 1228 **Question Id :** 48558438458 **Question Type :** MCQ **Option Shuffling :** No **Is Question Mandatory :** No **Calculator :** None **Response Time :** N.A **Think Time :** N.A **Minimum Instruction Time :** 0

Correct Marks : 5 **Wrong Marks :** 1

Question Key Details :

Key	Value
Comprehension	MCQ

अप्रैल- मार्च 2021-22 में भारत का कुल निर्यात-----के उच्च स्तर पर पहुँच गया जो पिछले वर्ष की समान अवधि की तुलना में 34.50% अधिक है।

1. 599 बिलियन अमेरिकी डॉलर
2. 400.35 बिलियन अमेरिकी डॉलर
3. 669.65 बिलियन अमेरिकी डॉलर
4. 742.25 बिलियन अमेरिकी डॉलर

Options :

485584153829. 1
485584153830. 2
485584153831. 3
485584153832. 4

Question Number : 1229 Question Id : 48558438459 Question Type : MCQ Option Shuffling : No Is Question Mandatory : No Calculator : None Response Time : N.A Think Time : N.A Minimum Instruction Time : 0 Correct Marks : 5 Wrong Marks : 1

Question Key Details :

Key	Value
Comprehension	MCQ

The Green Revolution in India was an introduction of high yielding varieties (HYV) of seed for

1. Millet
2. Pulse
3. Wheat
4. Oil seed

Options :

485584153833. 1
485584153834. 2
485584153835. 3
485584153836. 4

Question Number : 1229 Question Id : 48558438459 Question Type : MCQ Option Shuffling : No Is Question Mandatory : No Calculator : None Response Time : N.A Think Time : N.A Minimum Instruction Time : 0 Correct Marks : 5 Wrong Marks : 1

Question Key Details :

Key	Value
Comprehension	MCQ

भारत में हरित क्रांति _____ के बीज की उच्च पैदावर किस्मों (HYV) का परिचय थी

1. बाजरा
2. दाल
3. गेहूँ
4. तेल बीज

Options :

485584153833. 1
485584153834. 2
485584153835. 3

Question Number : 1230 Question Id : 48558438460 Question Type : MCQ Option Shuffling : No Is Question Mandatory : No Calculator : None
Response Time : N.A Think Time : N.A Minimum Instruction Time : 0

Correct Marks : 5 Wrong Marks : 1

Question Key Details :

Key	Value
Comprehension	MCQ

Match List I with List II

LIST I Books		LIST II Authors	
A.	Hunger	I.	Orhan Pamuk
B.	Golden Girl	II.	Knut Hamsun
C.	My Name is Red	III.	Amitav Ghosh
D.	Sea of Poppies	IV.	P.T. Usha

Choose the correct answer from the options given below:

1. A-II, B-IV, C-III, D-I
2. A-II, B-IV, C-I, D-III
3. A-I, B-III, C-II, D-IV
4. A-IV, B-III, C-I, D-II

Options :

485584153837. 1
485584153838. 2
485584153839. 3
485584153840. 4

Question Number : 1230 Question Id : 48558438460 Question Type : MCQ Option Shuffling : No Is Question Mandatory : No Calculator : None
Response Time : N.A Think Time : N.A Minimum Instruction Time : 0

Correct Marks : 5 Wrong Marks : 1

Question Key Details :

Key	Value
Comprehension	MCQ

सूची I का सूची II से मिलान कीजिए

सूची I किताब		सूची II लेखक	
A.	भूख	I.	ओरहान पामुक
B.	गोल्डन गर्ल	II.	नट हेमसन
C.	माई नेम इज रेड	III.	अमितव घोष
D.	सी आफ पोपियो	IV.	पी टी ऊषा

निम्नलिखित विकल्पों में से सही उत्तर का चयन कीजिए :

1. A-II, B-IV, C-III, D-I
2. A-II, B-IV, C-I, D-III
3. A-I, B-III, C-II, D-IV
4. A-IV, B-III, C-I, D-II

Options :

485584153837. 1

485584153838. 2

485584153839. 3

485584153840. 4

Urdu

Group Number :	25
Group Id :	485584906
Group Maximum Duration :	45
Group Minimum Duration :	45
Show Attended Group? :	No
Edit Attended Group? :	No
Break time :	0
Group Marks :	200
Is this Group for Examiner? :	No
Examiner permission :	Cant View
Show Progress Bar? :	No

Urdu

Section Id :	4855841050
Section Number :	1
Section type :	Online
Mandatory or Optional :	Mandatory
Number of Questions :	50
Number of Questions to be attempted :	40
Section Marks :	200
Enable Mark as Answered Mark for Review and Clear Response :	Yes
Maximum Instruction Time :	0
Sub-Section Number :	1
Sub-Section Id :	4855842968
Question Shuffling Allowed :	No
Is Section Default? :	null
Sub-Section Number :	2
Sub-Section Id :	4855842969
Question Shuffling Allowed :	Yes
Is Section Default? :	null
Sub-Section Number :	3
Sub-Section Id :	4855842970
Question Shuffling Allowed :	No
Is Section Default? :	null
Sub-Section Number :	4
Sub-Section Id :	4855842971
Question Shuffling Allowed :	No
Is Section Default? :	null
Sub-Section Number :	5
Sub-Section Id :	4855842972
Question Shuffling Allowed :	Yes
Is Section Default? :	null