

इनमें से कौन-सा अनौपचारिक पत्र का उदाहरण नहीं है :

- (1) मित्र को पत्र
- (2) बड़े भाई को पत्र
- (3) प्रधानाचार्य को पत्र
- (4) माँ को पत्र

Options :

212807116877. 1
212807116878. 2
212807116879. 3
212807116880. 4

General Test

Group Number :	2
Group Id :	212807633
Group Maximum Duration :	60
Group Minimum Duration :	60
Show Attended Group? :	No
Edit Attended Group? :	No
Break time :	0
Group Marks :	250
Is this Group for Examiner? :	No
Examiner permission :	Cant View
Show Progress Bar? :	No

General Test

Section Id :	212807741
Section Number :	1
Section type :	Online
Mandatory or Optional :	Mandatory
Number of Questions :	60
Number of Questions to be attempted :	50
Section Marks :	250
Enable Mark as Answered Mark for Review and Clear Response :	Yes
Maximum Instruction Time :	0
Sub-Section Number :	1
Sub-Section Id :	2128072121
Question Shuffling Allowed :	Yes
Is Section Default? :	null

Question Number : 51 Question Id : 21280729126 Question Type : MCQ Option Shuffling : No Is Question Mandatory : No Calculator : None
Response Time : N.A Think Time : N.A Minimum Instruction Time : 0
Correct Marks : 5 Wrong Marks : 1

Question Key Details :

Key	Value
Comprehension	MCQ

A cone of height 24 cm and base radius 6 cm is made of modelling clay. A child reshapes it in the form of a sphere. The radius of the sphere is :

- (1) 3 cm
- (2) 12 cm
- (3) 9 cm
- (4) 6 cm

Options :

212807116501. 1

212807116502. 2
212807116503. 3
212807116504. 4

Question Number : 51 Question Id : 21280729126 Question Type : MCQ Option Shuffling : No Is Question Mandatory : No Calculator : None
Response Time : N.A Think Time : N.A Minimum Instruction Time : 0

Correct Marks : 5 Wrong Marks : 1

Question Key Details :

Key	Value
Comprehension	MCQ

एक 24 सेमी ऊँचा शंकु जो चिकनी मिट्टी से बना है उसकी आधार त्रिज्या 6 सेमी है। एक बालक इसे गोले का आकार देता है। गोले की त्रिज्या है :

- (1) 3 सेमी
- (2) 12 सेमी
- (3) 9 सेमी
- (4) 6 सेमी

Options :

212807116501. 1
212807116502. 2
212807116503. 3
212807116504. 4

Question Number : 52 Question Id : 21280729127 Question Type : MCQ Option Shuffling : No Is Question Mandatory : No Calculator : None
Response Time : N.A Think Time : N.A Minimum Instruction Time : 0

Correct Marks : 5 Wrong Marks : 1

Question Key Details :

Key	Value
Comprehension	MCQ

The ratio of working efficiency of A and B is 4 : 5. If A alone completes the work in 15 days then in how many days can B alone complete the work ?

- (1) 15 days
- (2) 12 days
- (3) 16 days
- (4) 20 days

Options :

212807116505. 1
212807116506. 2
212807116507. 3
212807116508. 4

Question Number : 52 Question Id : 21280729127 Question Type : MCQ Option Shuffling : No Is Question Mandatory : No Calculator : None
Response Time : N.A Think Time : N.A Minimum Instruction Time : 0

Correct Marks : 5 Wrong Marks : 1

Question Key Details :

Key	Value
Comprehension	MCQ

A और B की काम करने की क्षमता का अनुपात 4 : 5 है। यदि A अकेला कार्य को 15 दिनों में पूरा करता है तो B अकेला उस कार्य को कितने दिनों में पूरा करेगा ?

- (1) 15 दिन
- (2) 12 दिन
- (3) 16 दिन
- (4) 20 दिन

Options :

212807116505. 1
212807116506. 2
212807116507. 3
212807116508. 4

Question Number : 53 Question Id : 21280729128 Question Type : MCQ Option Shuffling : No Is Question Mandatory : No Calculator : None Response Time : N.A Think Time : N.A Minimum Instruction Time : 0

Correct Marks : 5 Wrong Marks : 1

Question Key Details :

Key	Value
Comprehension	MCQ

What is the mode of the following data ?

4, 6, 5, 9, 3, 2, 7, 7, 6, 5, 4, 9, 10, 10, 3, 4, 7, 6, 9, 9

- (1) 7
- (2) 6
- (3) 9
- (4) 10

Options :

212807116509. 1
212807116510. 2
212807116511. 3
212807116512. 4

Question Number : 53 Question Id : 21280729128 Question Type : MCQ Option Shuffling : No Is Question Mandatory : No Calculator : None Response Time : N.A Think Time : N.A Minimum Instruction Time : 0

Correct Marks : 5 Wrong Marks : 1

Question Key Details :

Key	Value
Comprehension	MCQ

निम्न आँकड़ों का बहुलक क्या है ?

4, 6, 5, 9, 3, 2, 7, 7, 6, 5, 4, 9, 10, 10, 3, 4, 7, 6, 9, 9

- (1) 7
- (2) 6
- (3) 9
- (4) 10

Options :

212807116509. 1
212807116510. 2
212807116511. 3
212807116512. 4

Question Number : 54 Question Id : 21280729129 Question Type : MCQ Option Shuffling : No Is Question Mandatory : No Calculator : None Response Time : N.A Think Time : N.A Minimum Instruction Time : 0

Correct Marks : 5 Wrong Marks : 1

Question Key Details :

Key	Value
Comprehension	MCQ

Four persons are chosen at random from a group of 3 men, 2 women and 4 children. The probability of having 2 children out of 4 is :

- (1) $\frac{1}{9}$
- (2) $\frac{1}{5}$
- (3) $\frac{10}{21}$
- (4) $\frac{1}{12}$

Options :

212807116513. 1
212807116514. 2
212807116515. 3
212807116516. 4

Question Number : 54 Question Id : 21280729129 Question Type : MCQ Option Shuffling : No Is Question Mandatory : No Calculator : None Response Time : N.A Think Time : N.A Minimum Instruction Time : 0

Correct Marks : 5 Wrong Marks : 1

Question Key Details :

Key	Value
Comprehension	MCQ

3 पुरुषों, 2 महिलाओं तथा 4 बालकों के एक समूह में से चार व्यक्ति यादृच्छिक रूप से चुने गए। चार में से 2 बालक होने की प्रायिकता क्या है ?

- (1) $\frac{1}{9}$
- (2) $\frac{1}{5}$
- (3) $\frac{10}{21}$
- (4) $\frac{1}{12}$

Options :

212807116513. 1
212807116514. 2
212807116515. 3
212807116516. 4

Question Number : 55 Question Id : 21280729130 Question Type : MCQ Option Shuffling : No Is Question Mandatory : No Calculator : None Response Time : N.A Think Time : N.A Minimum Instruction Time : 0

Correct Marks : 5 Wrong Marks : 1

Question Key Details :

Key	Value
Comprehension	MCQ

The mean proportion between 4 and 64 is :

- (1) 64
- (2) 16
- (3) 45
- (4) 24

Options :

212807116517. 1
212807116518. 2
212807116519. 3
212807116520. 4

Question Number : 55 Question Id : 21280729130 Question Type : MCQ Option Shuffling : No Is Question Mandatory : No Calculator : None Response Time : N.A Think Time : N.A Minimum Instruction Time : 0

Correct Marks : 5 Wrong Marks : 1

Question Key Details :

Key	Value
Comprehension	MCQ

4 और 64 के बीच माध्यानुपातिक है :

- (1) 64
- (2) 16
- (3) 45
- (4) 24

Options :

212807116517. 1
212807116518. 2
212807116519. 3
212807116520. 4

Question Number : 56 Question Id : 21280729131 Question Type : MCQ Option Shuffling : No Is Question Mandatory : No Calculator : None Response Time : N.A Think Time : N.A Minimum Instruction Time : 0

Correct Marks : 5 Wrong Marks : 1

Question Key Details :

Key	Value
Comprehension	MCQ

The angle of elevation of the sun, when the length of the shadow of a tree is equal to the height of the tree is :

- (1) 30°
- (2) 45°
- (3) 60°
- (4) 90°

Options :

212807116521. 1
212807116522. 2
212807116523. 3
212807116524. 4

Question Number : 56 Question Id : 21280729131 Question Type : MCQ Option Shuffling : No Is Question Mandatory : No Calculator : None Response Time : N.A Think Time : N.A Minimum Instruction Time : 0

Correct Marks : 5 Wrong Marks : 1

Question Key Details :

Key	Value
Comprehension	MCQ

जब एक पेड़ की परछाई की लंबाई उस पेड़ की ऊंचाई के समान होती है तो सूर्य का उन्नयन कोण है :

- (1) 30°
- (2) 45°
- (3) 60°
- (4) 90°

Options :

- 212807116521. 1
- 212807116522. 2
- 212807116523. 3
- 212807116524. 4

Question Number : 57 Question Id : 21280729132 Question Type : MCQ Option Shuffling : No Is Question Mandatory : No Calculator : None Response Time : N.A Think Time : N.A Minimum Instruction Time : 0

Correct Marks : 5 Wrong Marks : 1

Question Key Details :

Key	Value
Comprehension	MCQ

For which value of the k, the pair of linear equations has no solution

$6x - 3y + 10 = 0$ and $kx - y + 9 = 0$:

- (1) 1
- (2) -1
- (3) 2
- (4) -2

Options :

- 212807116525. 1
- 212807116526. 2
- 212807116527. 3
- 212807116528. 4

Question Number : 57 Question Id : 21280729132 Question Type : MCQ Option Shuffling : No Is Question Mandatory : No Calculator : None Response Time : N.A Think Time : N.A Minimum Instruction Time : 0

Correct Marks : 5 Wrong Marks : 1

Question Key Details :

Key	Value
Comprehension	MCQ

k के किस मान के लिए रेखिक समीकरणों का कोई हल नहीं है।

$6x - 3y + 10 = 0$ और $kx - y + 9 = 0$

- (1) 1
- (2) -1
- (3) 2
- (4) -2

Options :

- 212807116525. 1
- 212807116526. 2
- 212807116527. 3
- 212807116528. 4

Question Number : 58 Question Id : 21280729133 Question Type : MCQ Option Shuffling : No Is Question Mandatory : No Calculator : None Response Time : N.A Think Time : N.A Minimum Instruction Time : 0

Correct Marks : 5 Wrong Marks : 1

Question Key Details :

Key	Value
Comprehension	MCQ

'A' spins a spinner that is split into 10 equal sections marked as 1, 3, 2, 1, 2, 2, 3, 1, 2, 1. What is the probability that the spinner will land on number 2 ?

(1) $\frac{1}{10}$

(2) $\frac{2}{5}$

(3) $\frac{1}{2}$

(4) $\frac{1}{5}$

Options :

212807116529. 1

212807116530. 2

212807116531. 3

212807116532. 4

Question Number : 58 Question Id : 21280729133 Question Type : MCQ Option Shuffling : No Is Question Mandatory : No Calculator : None Response Time : N.A Think Time : N.A Minimum Instruction Time : 0

Correct Marks : 5 Wrong Marks : 1

Question Key Details :

Key	Value
Comprehension	MCQ

'A' एक स्पिनर जो 10 बराबर भागों में बटा हुआ है और जिस पर निम्न अंक 1, 3, 2, 1, 2, 2, 3, 1, 2, 1 अंकित हैं, को घुमाता है । स्पिनर के 2 अंक आने की प्रायिकता होगी :

(1) $\frac{1}{10}$

(2) $\frac{2}{5}$

(3) $\frac{1}{2}$

(4) $\frac{1}{5}$

Options :

212807116529. 1

212807116530. 2

212807116531. 3

212807116532. 4

Question Number : 59 Question Id : 21280729134 Question Type : MCQ Option Shuffling : No Is Question Mandatory : No Calculator : None Response Time : N.A Think Time : N.A Minimum Instruction Time : 0

Correct Marks : 5 Wrong Marks : 1

Question Key Details :

Key	Value
Comprehension	MCQ

Match List - I with List - II.

List - I (Shape)	List - II (Area)
(A) Square	(I) πa^2
(B) Triangle	(II) $b \times h$
(C) Circle	(III) $a \times a$
(D) Parallelogram	(IV) $\frac{1}{2} b \times h$

Choose the **correct** answer from the options given below :

- (1) (A)-(I), (B)-(II), (C)-(III), (D)-(IV)
- (2) (A)-(III), (B)-(IV), (C)-(I), (D)-(II)
- (3) (A)-(II), (B)-(III), (C)-(II), (D)-(IV)
- (4) (A)-(IV), (B)-(I), (C)-(IV), (D)-(I)

Options :

212807116533. 1
212807116534. 2
212807116535. 3
212807116536. 4

Question Number : 59 Question Id : 21280729134 Question Type : MCQ Option Shuffling : No Is Question Mandatory : No Calculator : None
Response Time : N.A Think Time : N.A Minimum Instruction Time : 0

Correct Marks : 5 Wrong Marks : 1

Question Key Details :

Key	Value
Comprehension	MCQ

सूची-I से सूची-II का मिलान कीजिए :

सूची-I (आकृति)	सूची-II (क्षेत्रफल)
(A) वर्ग	(I) πa^2
(B) त्रिभुज	(II) $b \times h$
(C) वृत्त	(III) $a \times a$
(D) समांतर चतुर्भुज	(IV) $\frac{1}{2} b \times h$

नीचे दिए गए विकल्पों में से **सही उत्तर** का चयन कीजिए :

- (1) (A)-(I), (B)-(II), (C)-(III), (D)-(IV)
- (2) (A)-(III), (B)-(IV), (C)-(I), (D)-(II)
- (3) (A)-(II), (B)-(III), (C)-(II), (D)-(IV)
- (4) (A)-(IV), (B)-(I), (C)-(IV), (D)-(I)

Options :

212807116533. 1
212807116534. 2
212807116535. 3
212807116536. 4

Question Number : 60 Question Id : 21280729135 Question Type : MCQ Option Shuffling : No Is Question Mandatory : No Calculator : None
Response Time : N.A Think Time : N.A Minimum Instruction Time : 0

Correct Marks : 5 Wrong Marks : 1

Question Key Details :

Key	Value
Comprehension	MCQ

How many 3-digit even numbers can be formed by using the digits 1 to 9 if no digit is repeated ?

- (1) 80
- (2) 224
- (3) 288
- (4) 504

Options :

212807116537. 1
212807116538. 2
212807116539. 3
212807116540. 4

Question Number : 60 Question Id : 21280729135 Question Type : MCQ Option Shuffling : No Is Question Mandatory : No Calculator : None
Response Time : N.A Think Time : N.A Minimum Instruction Time : 0

Correct Marks : 5 Wrong Marks : 1

Question Key Details :

Key	Value
Comprehension	MCQ

1 से 9 अंकों का उपयोग करके बिना किसी अंक को दोहराए 3 अंकों की कितनी संख्याएँ बन सकती है ?

- (1) 80
- (2) 224
- (3) 288
- (4) 504

Options :

212807116537. 1
212807116538. 2
212807116539. 3
212807116540. 4

Question Number : 61 Question Id : 21280729136 Question Type : MCQ Option Shuffling : No Is Question Mandatory : No Calculator : None
Response Time : N.A Think Time : N.A Minimum Instruction Time : 0

Correct Marks : 5 Wrong Marks : 1

Question Key Details :

Key	Value
Comprehension	MCQ

In a certain store, the profit of an article is 380% of the cost. If the cost increases by 20% but the selling price remains the same, what percentage of the selling price is the profit :

- (1) 40 %
- (2) 75 %
- (3) 70 %
- (4) 60 %

Options :

212807116541. 1
212807116542. 2
212807116543. 3
212807116544. 4

Question Number : 61 Question Id : 21280729136 Question Type : MCQ Option Shuffling : No Is Question Mandatory : No Calculator : None
Response Time : N.A Think Time : N.A Minimum Instruction Time : 0

Correct Marks : 5 Wrong Marks : 1

Question Key Details :

Key	Value
Comprehension	MCQ

किसी निश्चित दुकान पर, एक सामान पर लाभ उसके क्रय मूल्य का 380% है। यदि क्रय मूल्य 20% बढ़ता है परंतु विक्रय मूल्य समान रहता है, तो लाभ विक्रय मूल्य का कितना प्रतिशत (%) हैं ?

- (1) 40%
- (2) 75%
- (3) 70%
- (4) 60%

Options :

- 212807116541. 1
- 212807116542. 2
- 212807116543. 3
- 212807116544. 4

Question Number : 62 Question Id : 21280729137 Question Type : MCQ Option Shuffling : No Is Question Mandatory : No Calculator : None Response Time : N.A Think Time : N.A Minimum Instruction Time : 0

Correct Marks : 5 Wrong Marks : 1

Question Key Details :

Key	Value
Comprehension	MCQ

A monthly bus ticket costs 20 percent more than a single ticket. A week's extension can be had for the former by paying 10% of the monthly ticket's cost. If the money paid for the monthly ticket (with extension) is ₹ 660, then the price of the single ticket is :

- (1) ₹ 580
- (2) ₹ 500
- (3) ₹ 560
- (4) ₹ 600

Options :

- 212807116545. 1
- 212807116546. 2
- 212807116547. 3
- 212807116548. 4

Question Number : 62 Question Id : 21280729137 Question Type : MCQ Option Shuffling : No Is Question Mandatory : No Calculator : None Response Time : N.A Think Time : N.A Minimum Instruction Time : 0

Correct Marks : 5 Wrong Marks : 1

Question Key Details :

Key	Value
Comprehension	MCQ

एक मासिक बस टिकट का मूल्य एकल टिकट के मूल्य से 20% अधिक है। मासिक टिकट के मूल्य का 10% भुगतान करके एक माह की टिकट में एक सप्ताह का विस्तार किया जा सकता है। यदि मासिक टिकट (विस्तारण के साथ) के भुगतान के लिए धन ₹ 660 है, तो एकल टिकट का मूल्य है :

- (1) ₹ 580
- (2) ₹ 500
- (3) ₹ 560
- (4) ₹ 600

Options :

- 212807116545. 1
- 212807116546. 2

212807116547. 3
212807116548. 4

Question Number : 63 Question Id : 21280729138 Question Type : MCQ Option Shuffling : No Is Question Mandatory : No Calculator : None Response Time : N.A Think Time : N.A Minimum Instruction Time : 0 Correct Marks : 5 Wrong Marks : 1

Question Key Details :

Key	Value
Comprehension	MCQ

An article is sold at a certain price. By selling it at $\frac{2}{3}$ of that price one loses 10%. Find the gain percentage at original price :

- (1) 35 %
- (2) 40 %
- (3) 45 %
- (4) 50 %

Options :

212807116549. 1
212807116550. 2
212807116551. 3
212807116552. 4

Question Number : 63 Question Id : 21280729138 Question Type : MCQ Option Shuffling : No Is Question Mandatory : No Calculator : None Response Time : N.A Think Time : N.A Minimum Instruction Time : 0 Correct Marks : 5 Wrong Marks : 1

Question Key Details :

Key	Value
Comprehension	MCQ

एक सामान को किसी निश्चित मूल्य पर बेचा गया इस मूल्य के $\frac{2}{3}$ मूल्य पर बेचने पर व्यक्ति को 10% की हानि हुई, प्रारंभिक मूल्य पर लाभ प्रतिशत ज्ञात कीजिए।

- (1) 35 %
- (2) 40 %
- (3) 45 %
- (4) 50 %

Options :

212807116549. 1
212807116550. 2
212807116551. 3
212807116552. 4

Question Number : 64 Question Id : 21280729139 Question Type : MCQ Option Shuffling : No Is Question Mandatory : No Calculator : None Response Time : N.A Think Time : N.A Minimum Instruction Time : 0 Correct Marks : 5 Wrong Marks : 1

Question Key Details :

Key	Value
Comprehension	MCQ

A, B, C, are three points on the circumference of a circle and if $AB = AC = 5\sqrt{2}$, $\angle BAC = 90^\circ$ then radius of the circle is _____.

- (1) 10 cm
- (2) 5 cm
- (3) 20 cm
- (4) 15 cm

Options :

212807116553. 1

212807116554. 2
212807116555. 3
212807116556. 4

Question Number : 64 Question Id : 21280729139 Question Type : MCQ Option Shuffling : No Is Question Mandatory : No Calculator : None
Response Time : N.A Think Time : N.A Minimum Instruction Time : 0

Correct Marks : 5 Wrong Marks : 1

Question Key Details :

Key	Value
Comprehension	MCQ

वृत्त की परिधि पर A, B, C, तीन बिन्दु है और यदि $AB = AC = 5\sqrt{2}$, $\angle BAC = 90^\circ$, तो वृत्त की त्रिज्या _____ है।

- (1) 10 सेमी
- (2) 5 सेमी
- (3) 20 सेमी
- (4) 15 सेमी

Options :

212807116553. 1
212807116554. 2
212807116555. 3
212807116556. 4

Question Number : 65 Question Id : 21280729140 Question Type : MCQ Option Shuffling : No Is Question Mandatory : No Calculator : None
Response Time : N.A Think Time : N.A Minimum Instruction Time : 0

Correct Marks : 5 Wrong Marks : 1

Question Key Details :

Key	Value
Comprehension	MCQ

The unit digit in the product $(784 \times 618 \times 917 \times 463)$ is :

- (1) 3
- (2) 4
- (3) 5
- (4) 2

Options :

212807116557. 1
212807116558. 2
212807116559. 3
212807116560. 4

Question Number : 65 Question Id : 21280729140 Question Type : MCQ Option Shuffling : No Is Question Mandatory : No Calculator : None
Response Time : N.A Think Time : N.A Minimum Instruction Time : 0

Correct Marks : 5 Wrong Marks : 1

Question Key Details :

Key	Value
Comprehension	MCQ

गुणनफल $(784 \times 618 \times 917 \times 463)$ में इकाई का अंक है :

- (1) 3
- (2) 4
- (3) 5
- (4) 2

Options :

212807116557. 1
212807116558. 2
212807116559. 3

Question Number : 66 Question Id : 21280729141 Question Type : MCQ Option Shuffling : No Is Question Mandatory : No Calculator : None
Response Time : N.A Think Time : N.A Minimum Instruction Time : 0

Correct Marks : 5 Wrong Marks : 1

Question Key Details :

Key	Value
Comprehension	MCQ

'A' rides a cycle at an average speed of 30 km/h and reaches the destination in 6 hours. B covers the same distance in 4 hours. If A increases the average speed by 10 km/h and B increases the average speed by 5 km/h What would be the difference in their time taken to reach the destination ?

- (1) 24 min
- (2) 30 min
- (3) 27 min
- (4) 54 min

Options :

212807116561.1

212807116562.2

212807116563.3

212807116564.4

Question Number : 66 Question Id : 21280729141 Question Type : MCQ Option Shuffling : No Is Question Mandatory : No Calculator : None
Response Time : N.A Think Time : N.A Minimum Instruction Time : 0

Correct Marks : 5 Wrong Marks : 1

Question Key Details :

Key	Value
Comprehension	MCQ

A 30 किमी/घंटा की औसत चाल से साइकिल की सवारी करता है और अपनी गन्तव्य स्थान पर 6 घंटे में पहुंचता है। B समान दूरी को 4 घंटे में पूरा करता है। यदि A अपनी औसत चाल को 10 किमी/घंटा से तथा B 5 किमी/घंटा से बढ़ाता है तो उनके गन्तव्य तक पहुंचने में समय का अंतर क्या होगा ?

- (1) 24 मिनट
- (2) 30 मिनट
- (3) 27 मिनट
- (4) 54 मिनट

Options :

212807116561.1

212807116562.2

212807116563.3

212807116564.4

Question Number : 67 Question Id : 21280729142 Question Type : MCQ Option Shuffling : No Is Question Mandatory : No Calculator : None
Response Time : N.A Think Time : N.A Minimum Instruction Time : 0

Correct Marks : 5 Wrong Marks : 1

Question Key Details :

Key	Value
Comprehension	MCQ

A well has to be dug out 20 m deep and its radius is 3.5 m. Find the cost of plastering the inner curved surface at ₹ 5 per square meter.

- (1) ₹ 750
- (2) ₹ 2,200
- (3) ₹ 1,000
- (4) ₹ 1,750

Options :

212807116565. 1
212807116566. 2
212807116567. 3
212807116568. 4

Question Number : 67 Question Id : 21280729142 Question Type : MCQ Option Shuffling : No Is Question Mandatory : No Calculator : None Response Time : N.A Think Time : N.A Minimum Instruction Time : 0

Correct Marks : 5 Wrong Marks : 1

Question Key Details :

Key	Value
Comprehension	MCQ

एक कुआँ जिसकी गहराई 20 मी तथा त्रिज्या 3.5 मी है को खोदा गया। ₹ 5 प्रति मी की दर से आंतरिक वक्र पृष्ठ को प्लास्टर करने का मूल्य ज्ञात कीजिए :

- (1) ₹ 750
- (2) ₹ 2,200
- (3) ₹ 1,000
- (4) ₹ 1,750

Options :

212807116565. 1
212807116566. 2
212807116567. 3
212807116568. 4

Question Number : 68 Question Id : 21280729143 Question Type : MCQ Option Shuffling : No Is Question Mandatory : No Calculator : None Response Time : N.A Think Time : N.A Minimum Instruction Time : 0

Correct Marks : 5 Wrong Marks : 1

Question Key Details :

Key	Value
Comprehension	MCQ

A woman wants to give ₹ 32,800 to her two grand children aged 17 years and 18 years. They must get the annual amounts when they are 20 years at 5% p.a. compound interest. Find the present share of the younger grand child.

- (1) ₹ 12,800
- (2) ₹ 16,400
- (3) ₹ 16,000
- (4) ₹ 8,400

Options :

212807116569. 1
212807116570. 2
212807116571. 3
212807116572. 4

Question Number : 68 Question Id : 21280729143 Question Type : MCQ Option Shuffling : No Is Question Mandatory : No Calculator : None Response Time : N.A Think Time : N.A Minimum Instruction Time : 0

Correct Marks : 5 Wrong Marks : 1

Question Key Details :

Key	Value
Comprehension	MCQ

एक महिला अपने दो पोते, जिनकी आयु 17 वर्ष 18 वर्ष है, को ₹ 32,800 देना चाहती है। वे 20 वर्ष की आयु तक 5% चक्रवृद्धि ब्याज की दर से वार्षिक राशि प्राप्त करते हैं, छोटे पोते का वर्तमान राशि ज्ञात कीजिए।

- (1) ₹ 12,800
- (2) ₹ 16,400
- (3) ₹ 16,000
- (4) ₹ 8,400

Options :

212807116569. 1
212807116570. 2
212807116571. 3
212807116572. 4

Question Number : 69 Question Id : 21280729144 Question Type : MCQ Option Shuffling : No Is Question Mandatory : No Calculator : None Response Time : N.A Think Time : N.A Minimum Instruction Time : 0

Correct Marks : 5 Wrong Marks : 1

Question Key Details :

Key	Value
Comprehension	MCQ

The area of a right-angled triangle with base 3 m and hypotenuse 5 m is :

- (1) 4 m²
- (2) 12 m²
- (3) 6 m²
- (4) 15 m²

Options :

212807116573. 1
212807116574. 2
212807116575. 3
212807116576. 4

Question Number : 69 Question Id : 21280729144 Question Type : MCQ Option Shuffling : No Is Question Mandatory : No Calculator : None Response Time : N.A Think Time : N.A Minimum Instruction Time : 0

Correct Marks : 5 Wrong Marks : 1

Question Key Details :

Key	Value
Comprehension	MCQ

आधार 3 मी तथा कर्ण 5 मी के समकोण त्रिभुज का क्षेत्रफल है :

- (1) 4 वर्ग मी
- (2) 12 वर्ग मी
- (3) 6 वर्ग मी
- (4) 15 वर्ग मी

Options :

212807116573. 1
212807116574. 2
212807116575. 3
212807116576. 4

Question Number : 70 Question Id : 21280729145 Question Type : MCQ Option Shuffling : No Is Question Mandatory : No Calculator : None Response Time : N.A Think Time : N.A Minimum Instruction Time : 0

Correct Marks : 5 Wrong Marks : 1

Question Key Details :

Key	Value
Comprehension	MCQ

17th term of the A.P. 13, 16, 19, 22, 25, is :

- (1) 67
- (2) 58
- (3) 61
- (4) 64

Options :

- 212807116577. 1
- 212807116578. 2
- 212807116579. 3
- 212807116580. 4

Question Number : 70 Question Id : 21280729145 Question Type : MCQ Option Shuffling : No Is Question Mandatory : No Calculator : None Response Time : N.A Think Time : N.A Minimum Instruction Time : 0

Correct Marks : 5 Wrong Marks : 1

Question Key Details :

Key	Value
Comprehension	MCQ

संमातर श्रेणी 13, 16, 19, 22, 25, का 17 वाँ पद है :

- (1) 67
- (2) 58
- (3) 61
- (4) 64

Options :

- 212807116577. 1
- 212807116578. 2
- 212807116579. 3
- 212807116580. 4

Question Number : 71 Question Id : 21280729146 Question Type : MCQ Option Shuffling : No Is Question Mandatory : No Calculator : None Response Time : N.A Think Time : N.A Minimum Instruction Time : 0

Correct Marks : 5 Wrong Marks : 1

Question Key Details :

Key	Value
Comprehension	MCQ

Which letter is 6th to the left of T in the letter series ?

- (1) J
- (2) K
- (3) L
- (4) N

Options :

- 212807116581. 1
- 212807116582. 2
- 212807116583. 3
- 212807116584. 4

Question Number : 71 Question Id : 21280729146 Question Type : MCQ Option Shuffling : No Is Question Mandatory : No Calculator : None Response Time : N.A Think Time : N.A Minimum Instruction Time : 0

Correct Marks : 5 Wrong Marks : 1

Question Key Details :

Key	Value
Comprehension	MCQ

अक्षर श्रृंखला में कौन सा अक्षर 'T' के बाँए से छठे स्थान पर है ?

- (1) J
- (2) K
- (3) L
- (4) N

Options :

- 212807116581. 1
- 212807116582. 2
- 212807116583. 3
- 212807116584. 4

Question Number : 72 Question Id : 21280729147 Question Type : MCQ Option Shuffling : No Is Question Mandatory : No Calculator : None Response Time : N.A Think Time : N.A Minimum Instruction Time : 0

Correct Marks : 5 Wrong Marks : 1

Question Key Details :

Key	Value
Comprehension	MCQ

Which one from the four answer figures should come at the right of the problem figures to complete the series logically :



- (1)
- (2)
- (3)
- (4)

Options :

- 212807116585. 1
- 212807116586. 2
- 212807116587. 3
- 212807116588. 4

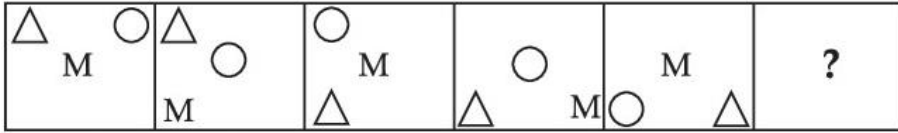
Question Number : 72 Question Id : 21280729147 Question Type : MCQ Option Shuffling : No Is Question Mandatory : No Calculator : None Response Time : N.A Think Time : N.A Minimum Instruction Time : 0

Correct Marks : 5 Wrong Marks : 1

Question Key Details :

Key	Value
Comprehension	MCQ

निम्न चार उत्तर आकृतियों में से समस्यात्मक आकृतियों को तर्क रूप से पूर्ण करने के लिए उसके दाएँ में कौन सी आकृति आनी चाहिए :



- (1)
- (2)
- (3)
- (4)

Options :

212807116585. 1
 212807116586. 2
 212807116587. 3
 212807116588. 4

Question Number : 73 Question Id : 21280729148 Question Type : MCQ Option Shuffling : No Is Question Mandatory : No Calculator : None
 Response Time : N.A Think Time : N.A Minimum Instruction Time : 0

Correct Marks : 5 Wrong Marks : 1

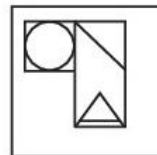
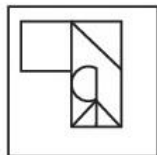
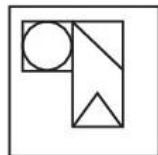
Question Key Details :

Key	Value
Comprehension	MCQ

Which among the four answer figures will be formed from the cut out pieces given in the question figure ?

Question figure

Answer figures



(A)

(B)

(C)

(D)

- (1) (A)
 (2) (B)
 (3) (C)
 (4) (D)

Options :

212807116589. 1

212807116590. 2
212807116591. 3
212807116592. 4

Question Number : 73 Question Id : 21280729148 Question Type : MCQ Option Shuffling : No Is Question Mandatory : No Calculator : None
Response Time : N.A Think Time : N.A Minimum Instruction Time : 0

Correct Marks : 5 Wrong Marks : 1

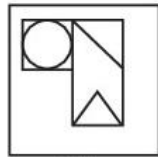
Question Key Details :

Key	Value
Comprehension	MCQ

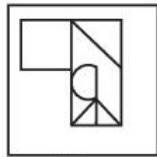
निम्न चार उत्तर आकृतियों में से कौन सी आकृति प्रश्न आकृति में दिए गए हिस्सों द्वारा बन सकती है।

प्रश्न आकृति

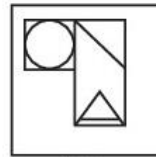
उत्तर आकृतियाँ



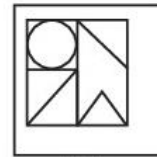
(A)



(B)



(C)



(D)

- (1) (A)
(2) (B)
(3) (C)
(4) (D)

Options :

212807116589. 1
212807116590. 2
212807116591. 3
212807116592. 4

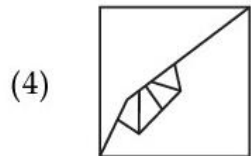
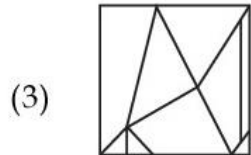
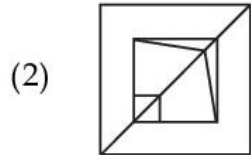
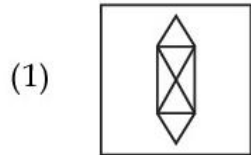
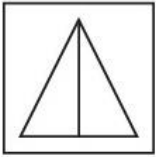
Question Number : 74 Question Id : 21280729149 Question Type : MCQ Option Shuffling : No Is Question Mandatory : No Calculator : None
Response Time : N.A Think Time : N.A Minimum Instruction Time : 0

Correct Marks : 5 Wrong Marks : 1

Question Key Details :

Key	Value
Comprehension	MCQ

Choose the alternative figure in which the problem figure is embedded problem figure :



Options :

- 212807116593. 1
- 212807116594. 2
- 212807116595. 3
- 212807116596. 4

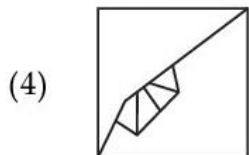
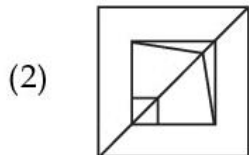
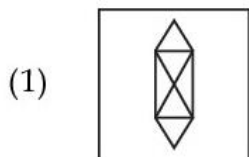
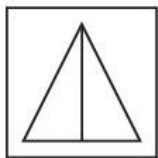
Question Number : 74 Question Id : 21280729149 Question Type : MCQ Option Shuffling : No Is Question Mandatory : No Calculator : None Response Time : N.A Think Time : N.A Minimum Instruction Time : 0

Correct Marks : 5 Wrong Marks : 1

Question Key Details :

Key	Value
Comprehension	MCQ

विकल्पीय आकृतियों में कौन सी आकृति में समस्या आकृति अंतः स्थापित होगी ?



Options :

- 212807116593. 1
- 212807116594. 2
- 212807116595. 3
- 212807116596. 4

Question Number : 75 Question Id : 21280729150 Question Type : MCQ Option Shuffling : No Is Question Mandatory : No Calculator : None Response Time : N.A Think Time : N.A Minimum Instruction Time : 0

Correct Marks : 5 Wrong Marks : 1

Question Key Details :

Key	Value
Comprehension	MCQ

Group the given figures onto three classes using each figure only once.

- D E N U W H B M A
- (a) (b) (c) (d) (e) (f) (g) (h) (i)
- (1) (a, d, g); (b, e, c); (f, h, i)
- (2) (a, d, g); (b, e, h); (c, f, i)
- (3) (a, b, c); (d, e, f); (g, h, i)
- (4) (d, g, b); (c, h, f); (a, c, i)

Options :

- 212807116597. 1
- 212807116598. 2
- 212807116599. 3
- 212807116600. 4

Question Number : 75 Question Id : 21280729150 Question Type : MCQ Option Shuffling : No Is Question Mandatory : No Calculator : None Response Time : N.A Think Time : N.A Minimum Instruction Time : 0

Correct Marks : 5 Wrong Marks : 1

Question Key Details :

Key	Value
-----	-------

प्रत्येक आकृति को केवल एक बार प्रयोग करते हुए, दी गई आकृतियों का तीन वर्गों में समूह बनाइए।

D E N U W H B M A
(a) (b) (c) (d) (e) (f) (g) (h) (i)

- (1) (a, d, g); (b, e, c); (f, h, i)
(2) (a, d, g); (b, e, h); (c, f, i)
(3) (a, b, c); (d, e, f); (g, h, i)
(4) (d, g, b); (c, h, f); (a, c, i)

Options :

212807116597. 1
212807116598. 2
212807116599. 3
212807116600. 4

Question Number : 76 Question Id : 21280729151 Question Type : MCQ Option Shuffling : No Is Question Mandatory : No Calculator : None Response Time : N.A Think Time : N.A Minimum Instruction Time : 0

Correct Marks : 5 Wrong Marks : 1

Question Key Details :

Key	Value
Comprehension	MCQ

In a class of 48 students Meena's rank is 18th from the bottom. What is her rank from the top ?

- (1) 31st
(2) 25th
(3) 27th
(4) 30th

Options :

212807116601. 1
212807116602. 2
212807116603. 3
212807116604. 4

Question Number : 76 Question Id : 21280729151 Question Type : MCQ Option Shuffling : No Is Question Mandatory : No Calculator : None Response Time : N.A Think Time : N.A Minimum Instruction Time : 0

Correct Marks : 5 Wrong Marks : 1

Question Key Details :

Key	Value
Comprehension	MCQ

48 विद्यार्थियों की कक्षा में मीना का नीचे से 18वाँ स्थान है। ऊपर से उसका क्या स्थान है ?

- (1) 31वाँ
(2) 25वाँ
(3) 27वाँ
(4) 30वाँ

Options :

212807116601. 1
212807116602. 2
212807116603. 3
212807116604. 4

Question Number : 77 Question Id : 21280729152 Question Type : MCQ Option Shuffling : No Is Question Mandatory : No Calculator : None Response Time : N.A Think Time : N.A Minimum Instruction Time : 0

Correct Marks : 5 Wrong Marks : 1

Question Key Details :

Key	Value
Comprehension	MCQ

P is the uncle of Q, who is the daughter of R and R is the daughter-in-law of S. How is P related to S ?

- (1) Son
- (2) Cousin
- (3) Brother
- (4) Father

Options :

212807116605. 1
212807116606. 2
212807116607. 3
212807116608. 4

Question Number : 77 Question Id : 21280729152 Question Type : MCQ Option Shuffling : No Is Question Mandatory : No Calculator : None Response Time : N.A Think Time : N.A Minimum Instruction Time : 0

Correct Marks : 5 Wrong Marks : 1

Question Key Details :

Key	Value
Comprehension	MCQ

P, Q का अंकल है। Q, R की पुत्री है और R, S की बहू है। P, S से कैसे संबंधित है ?

- (1) पुत्र
- (2) चचेरा भाई
- (3) भाई
- (4) पिता

Options :

212807116605. 1
212807116606. 2
212807116607. 3
212807116608. 4

Question Number : 78 Question Id : 21280729153 Question Type : MCQ Option Shuffling : No Is Question Mandatory : No Calculator : None Response Time : N.A Think Time : N.A Minimum Instruction Time : 0

Correct Marks : 5 Wrong Marks : 1

Question Key Details :

Key	Value
Comprehension	MCQ

Statement : Mostly people who stop smoking gain weight.

Assumptions : I. If one stops smoking one will gain weight.

II. If one does not stop smoking, one will not gain weight.

Read the statement and assumptions and decide which of the assumptions is implicit in the statement.

- (1) If only I is implicit
- (2) If only II is implicit
- (3) If both I and II are implicit
- (4) If neither I nor II is implicit

Options :

212807116609. 1
212807116610. 2
212807116611. 3
212807116612. 4

Question Number : 78 Question Id : 21280729153 Question Type : MCQ Option Shuffling : No Is Question Mandatory : No Calculator : None
Response Time : N.A Think Time : N.A Minimum Instruction Time : 0

Correct Marks : 5 Wrong Marks : 1

Question Key Details :

Key	Value
Comprehension	MCQ

कथन : धूम्रपान बंद करने के बाद अधिकतर व्यक्तियों का भार बढ़ जाता है।

मान्यताएँ : I यदि कोई धूम्रपान बंद करता है, उसका भार बढ़ेगा।

II यदि कोई धूम्रपान बंद नहीं करता तो, उसका भार नहीं बढ़ेगा।

कथन तथा मान्यताओं को पढ़े तथा यि निर्धारित करें कि इनमें से कौन सा कथन धारणा निहित है।

- (1) केवल I की धारणा निहित है।
- (2) केवल II ही धारणा निहित है।
- (3) I और II दोनों ही धारणा निहित है।
- (4) न ही I, न ही II धारणा निहित है।

Options :

212807116609. 1
212807116610. 2
212807116611. 3
212807116612. 4

Question Number : 79 Question Id : 21280729154 Question Type : MCQ Option Shuffling : No Is Question Mandatory : No Calculator : None
Response Time : N.A Think Time : N.A Minimum Instruction Time : 0

Correct Marks : 5 Wrong Marks : 1

Question Key Details :

Key	Value
Comprehension	MCQ

Choose the odd one out from the following :

- (1) Frog
- (2) Fish
- (3) Snake
- (4) Hen

Options :

212807116613. 1
212807116614. 2
212807116615. 3
212807116616. 4

Question Number : 79 Question Id : 21280729154 Question Type : MCQ Option Shuffling : No Is Question Mandatory : No Calculator : None
Response Time : N.A Think Time : N.A Minimum Instruction Time : 0

Correct Marks : 5 Wrong Marks : 1

Question Key Details :

Key	Value
Comprehension	MCQ

निम्नलिखित में उसे चुनिए जो दूसरों से भिन्न है :

- (1) मेंढक
- (2) मछली
- (3) साँप
- (4) मुर्गी

Options :

212807116613. 1
212807116614. 2
212807116615. 3
212807116616. 4

Question Number : 80 Question Id : 21280729155 Question Type : MCQ Option Shuffling : No Is Question Mandatory : No Calculator : None Response Time : N.A Think Time : N.A Minimum Instruction Time : 0

Correct Marks : 5 Wrong Marks : 1

Question Key Details :

Key	Value
Comprehension	MCQ

Choose the number which is different from others in the groups ?

751, 734, 981, 853, 532

- (1) 532
- (2) 751
- (3) 981
- (4) 734

Options :

212807116617. 1
212807116618. 2
212807116619. 3
212807116620. 4

Question Number : 80 Question Id : 21280729155 Question Type : MCQ Option Shuffling : No Is Question Mandatory : No Calculator : None Response Time : N.A Think Time : N.A Minimum Instruction Time : 0

Correct Marks : 5 Wrong Marks : 1

Question Key Details :

Key	Value
Comprehension	MCQ

समूह में से उस संख्या को चुनिए जो दूसरी संख्याओं से भिन्न है ?

751, 734, 981, 853, 532

- (1) 532
- (2) 751
- (3) 981
- (4) 734

Options :

212807116617. 1
212807116618. 2
212807116619. 3
212807116620. 4

Question Number : 81 Question Id : 21280729156 Question Type : MCQ Option Shuffling : No Is Question Mandatory : No Calculator : None Response Time : N.A Think Time : N.A Minimum Instruction Time : 0

Correct Marks : 5 Wrong Marks : 1

Question Key Details :

Key	Value
Comprehension	MCQ

Read the following information carefully and answer the given question.

Nine friends A, B, C, D, E, F, G, H and I are sitting around a circle facing the centre. I sits fifth to the right of G. C is not an immediate neighbour of either G or I. B sits between H and E. C sits fourth to left of the E. D sits second to the right of F. H is not an immediate neighbour of I. Which of the following is D's position with respect to B in the anti-clockwise direction starting from B ?

- (1) Fourth to the left
- (2) Third to the right
- (3) Fifth to the right
- (4) Fifth to the left

Options :

212807116621. 1
212807116622. 2
212807116623. 3
212807116624. 4

Question Number : 81 Question Id : 21280729156 Question Type : MCQ Option Shuffling : No Is Question Mandatory : No Calculator : None Response Time : N.A Think Time : N.A Minimum Instruction Time : 0

Correct Marks : 5 Wrong Marks : 1

Question Key Details :

Key	Value
Comprehension	MCQ

निम्नलिखित सूचना को ध्यानपूर्वक पढ़िए ओर दिए गए प्रश्नों के उत्तर दीजिए।

नौ दोस्त A, B, C, D, E, F, G, H और I एक गोले के चारों ओर केन्द्र को तरफ मुख करके बैठे हैं। I, G के दाए से पांचवे स्थान पर बैठा है। C, G और I का निकटतम पड़ोसी नहीं है। B, H और E बीच में बैठा है। C, E के बाए से चौथे स्थान पर बैठा है। D, F के दाए से दूसरा स्थान पर बैठा है। H, I का निकटतम पड़ोसी नहीं है। B से प्रारंभ करके, वामावर्त दिशा में B की तुलना में D की स्थिति क्या है ?

- (1) बाएँ से चौथी
- (2) दाएँ से तीसरी
- (3) दाएँ से पांचवी
- (4) बाएँ से पांचवी

Options :

212807116621. 1
212807116622. 2
212807116623. 3
212807116624. 4

Question Number : 82 Question Id : 21280729157 Question Type : MCQ Option Shuffling : No Is Question Mandatory : No Calculator : None Response Time : N.A Think Time : N.A Minimum Instruction Time : 0

Correct Marks : 5 Wrong Marks : 1

Question Key Details :

Key	Value
Comprehension	MCQ

Which conclusion definitely follows from the given statement :

Statement : A private medical college has started a cell which will conduct counselling workshops in the field of stress management to patients and general public.

Conclusion : I. The hospital has needed resources to start such activity.

II. Patients and general public feel a need to have such cell in the hospital.

- (1) If only conclusion I follow;
- (2) If only conclusion II follow;
- (3) If either I or II follows;
- (4) If both I and II follow

Options :

212807116625. 1

212807116626. 2

212807116627. 3

212807116628. 4

Question Number : 82 **Question Id :** 21280729157 **Question Type :** MCQ **Option Shuffling :** No **Is Question Mandatory :** No **Calculator :** None
Response Time : N.A **Think Time :** N.A **Minimum Instruction Time :** 0

Correct Marks : 5 **Wrong Marks :** 1

Question Key Details :

Key	Value
Comprehension	MCQ

दिए कथन से कौन सा निष्कर्ष निकलता है।

कथन : एक निजी मेडिकल कालेज में एक सेल शुरू किया है जो रोगी और आम जनता के लिए तनाव प्रबंधन के क्षेत्र में परामर्श कार्यशाला आयोजित करेगा।

निष्कर्ष : I. इस तरह की गतिविधियों को शुरू करने को लिए अस्पताल की संसाधन की आवश्यकता होती है।

II. रोगी और आम जनता अस्पताल में ऐसे सेल की जरूरत महसूस करते हैं।

- (1) यदि केवल निष्कर्ष I का अनुसरण करता है।
- (2) यदि केवल निष्कर्ष II का अनुसरण करता है।
- (3) यदि या तो I या II का अनुसरण करता है।
- (4) यदि दोनों I और II अनुसरण करता है।

Options :

212807116625. 1

212807116626. 2

212807116627. 3

212807116628. 4

Question Number : 83 **Question Id :** 21280729158 **Question Type :** MCQ **Option Shuffling :** No **Is Question Mandatory :** No **Calculator :** None
Response Time : N.A **Think Time :** N.A **Minimum Instruction Time :** 0

Correct Marks : 5 **Wrong Marks :** 1

Question Key Details :

Key	Value
Comprehension	MCQ

The two statements of the question followed by two conclusions I and II. Read the conclusion and decide most suitable answer.

Statement : No red is black.
Some black are yellow.

Conclusions :

- I. No yellow is red.
II. All red being yellow is a possibility.

- (1) If only conclusion I follows
(2) If only conclusion II follows
(3) If both conclusion I and II follows
(4) If none of the conclusion follows

Options :

212807116629. 1
212807116630. 2
212807116631. 3
212807116632. 4

Question Number : 83 Question Id : 21280729158 Question Type : MCQ Option Shuffling : No Is Question Mandatory : No Calculator : None Response Time : N.A Think Time : N.A Minimum Instruction Time : 0

Correct Marks : 5 Wrong Marks : 1

Question Key Details :

Key	Value
Comprehension	MCQ

निम्नलिखित प्रश्नों में दो कथन दिए गए, उसके बाद दो निष्कर्ष I और II निष्कर्ष पढ़ें और उपयुक्त उत्तर तय करें:

कथन : कोई लाल काला नहीं है
कुछ काले पीले हैं

निष्कर्ष :

- I. कोई पीला लाल नहीं है
II. सभी लाल के पीले होने की संभावना है

- (1) केवल निष्कर्ष I अनुसरण करता है,
(2) केवल निष्कर्ष II अनुसरण करता है,
(3) यदि दोनों निष्कर्ष I और II अनुसरण करते हैं
(4) यदि कोई भी निष्कर्ष अनुसरण नहीं करता है

Options :

212807116629. 1
212807116630. 2
212807116631. 3
212807116632. 4

Question Number : 84 Question Id : 21280729159 Question Type : MCQ Option Shuffling : No Is Question Mandatory : No Calculator : None Response Time : N.A Think Time : N.A Minimum Instruction Time : 0

Correct Marks : 5 Wrong Marks : 1

Question Key Details :

Key	Value
Comprehension	MCQ

Given below are two statements : one is labelled as **Assertion A** and the other is labelled as **Reason R** :

Assertion A : Food materials should not be soaked in water for a long time.

Reason R : Washing leads to loss of vitamin A and vitamin D from the food stuff.

In the light of the above statements, choose the **most appropriate** answer from the options given below :

- (1) Both A and R are correct and R is the explanation of A
- (2) Both A and R are correct but R is NOT the correct explanation of A
- (3) A is correct but R is not correct
- (4) A is not correct but R is correct

Options :

212807116633. 1

212807116634. 2

212807116635. 3

212807116636. 4

Question Number : 84 Question Id : 21280729159 Question Type : MCQ Option Shuffling : No Is Question Mandatory : No Calculator : None Response Time : N.A Think Time : N.A Minimum Instruction Time : 0

Correct Marks : 5 Wrong Marks : 1

Question Key Details :

Key	Value
Comprehension	MCQ

नीचे दो कथन हैं: एक **अभिकथन (A)** के रूप में लिखित है तो दूसरा उसके **कारण (R)** के रूप में :

अभिकथन A : खाद्य पदार्थों को अधिक देर तक पानी में भिगोना नहीं चाहिए।

कारण R : धोने से खाद्य पदार्थों से विटामिन A और विटामिन D का नुकसान हो जाता है।

उपरोक्त कथनों के संदर्भ में, नीचे दिए गए विकल्पों में से सर्वाधिक उपयुक्त **उत्तर** का चयन कीजिए।

- (1) A तथा R दोनों सही हैं तथा R, A की सही व्याख्या है
- (2) A और R दोनों सही हैं लेकिन R, A की सही व्याख्या नहीं है
- (3) A सही है लेकिन R सही नहीं है
- (4) A सही नहीं है लेकिन R सही है

Options :

212807116633. 1

212807116634. 2

212807116635. 3

212807116636. 4

Question Number : 85 Question Id : 21280729160 Question Type : MCQ Option Shuffling : No Is Question Mandatory : No Calculator : None Response Time : N.A Think Time : N.A Minimum Instruction Time : 0

Correct Marks : 5 Wrong Marks : 1

Question Key Details :

Key	Value
Comprehension	MCQ

Read the following information carefully and answer the question given below :

Following are the conditions for granting advance of ₹ 15 lakh to the farmers for purchasing a tractor by a Gramin Bank. The farmer must :

- I. have atleast six acres of cultivate land
- II. not be more than 49 years as on 2.12.2013.
- III. be able to produce collateral of atleast ₹ 10 lakh.
- IV. not have any outstanding unpaid loan from any bank.
- V. be able to produce recommendation letter from the Panchayat Pradhan

In case of farmer who satisfies all other criteria except.

at (I) above, but is able to cultivate more than one crop in each piece of land, the case is to be referred to chairman of the bank.

Mohan was born on 2 Feb, 1980. He has seven acres of cultivate land. He has submitted a recommendation letter issued by the Panchayat Pradhan. He can pledge collateral of more than ₹ 10 lakh. He does not have any unpaid loan from the bank.

- (1) If the advance is to be granted
- (2) If the advance is not be granted
- (3) If the data provided is not adequate, to take a decision.
- (4) If the case is to be referred to the Chairman of the bank

Options :

212807116637. 1
212807116638. 2
212807116639. 3
212807116640. 4

Question Number : 85 Question Id : 21280729160 Question Type : MCQ Option Shuffling : No Is Question Mandatory : No Calculator : None Response Time : N.A Think Time : N.A Minimum Instruction Time : 0

Correct Marks : 5 Wrong Marks : 1

Question Key Details :

Key	Value
Comprehension	MCQ

निम्नलिखित सूचनाओं को ध्यानपूर्वक पढ़ें और नीचे दिए गए प्रश्नों के उत्तर दें ?

ग्रामीण बैंक द्वारा किसानों को ट्रैक्टर खरीदने के लिए 15 लाख की अग्रिम राशि देने की निम्नलिखित शर्त है। किसान को

- I. कम से कम छह एकड़ खेती योग्य भूमि होनी चाहिए
 - II. आयु 2. 12. 2013 को 49 वर्ष से अधिक नहीं होनी चाहिए
 - III. कम से कम 10 लाख की कोलेटरल को निर्मित में सक्षम होना चाहिए
 - IV. किसी भी बैंक में कोई बकाया ऋण नहीं होना चाहिए
 - V. पंचायत प्रधान का अनुशंसा पत्र प्रस्तुत कर सकेंगे
- किसान के मामले में जो उपरोक्त

(1) को छोड़कर अन्य सभी मानदेही को पूरा करता है, लेकिन भूमि के प्रयोग टुकड़े में एक से अधिक फसल उगाने में सक्षम है, मामला बैंक के चौयरमैन (अध्यक्ष) को भेजा जाना चाहिए।

मोहन का जन्म 2 फरवरी 1980 को हुआ था। उसके पास 7 एकड़ खेती की उपजाऊ जमीन है। उसने पंचायत प्रधान द्वारा एक सिफारिश पत्र प्रस्तुत किया है। 10 लाख से अधिक की कोलेटरल को निर्मित करने में सक्षम है। उस पर बैंक की कोई बकाया ऋण नहीं है।

- (1) यदि अग्रिम दिया जाना चाहिए।
- (2) यदि अग्रिम नहीं दिया जाता चाहिए।
- (3) यदि प्रदान किया गया आकड़ा पर्याप्त नहीं, निर्णय लेने के लिए।
- (4) यदि मामला बैंक के चौयरमैन को भेजा जाना चाहिए।

Options :

212807116637. 1
212807116638. 2
212807116639. 3
212807116640. 4

Question Number : 86 Question Id : 21280729161 Question Type : MCQ Option Shuffling : No Is Question Mandatory : No Calculator : None Response Time : N.A Think Time : N.A Minimum Instruction Time : 0

Correct Marks : 5 Wrong Marks : 1

Question Key Details :

Key	Value
Comprehension	MCQ

In a certain code,

'li me tee' means 'roses are red'

'sik hee' means 'blue flowers'

'tee mit hee' means 'flowers are fruits'

How is 'flower' written in that code ?

- (1) li
- (2) tee
- (3) me
- (4) hee

Options :

212807116641. 1
212807116642. 2
212807116643. 3
212807116644. 4

Question Number : 86 Question Id : 21280729161 Question Type : MCQ Option Shuffling : No Is Question Mandatory : No Calculator : None Response Time : N.A Think Time : N.A Minimum Instruction Time : 0

Correct Marks : 5 Wrong Marks : 1

Question Key Details :

Key	Value
Comprehension	MCQ

एक निश्चित कूट में

'li me tee' का अर्थ है 'roses are red'

'sik hee' का अर्थ है 'blue flowers'

'tee mit hee' का अर्थ है 'flowers are fruits'

उस कूट में 'flower' को किस प्रकार लिखा जाएगा

- (1) li
- (2) tee
- (3) me
- (4) hee

Options :

212807116641. 1
212807116642. 2
212807116643. 3
212807116644. 4

Question Number : 87 Question Id : 21280729162 Question Type : MCQ Option Shuffling : No Is Question Mandatory : No Calculator : None
Response Time : N.A Think Time : N.A Minimum Instruction Time : 0

Correct Marks : 5 Wrong Marks : 1

Question Key Details :

Key	Value
Comprehension	MCQ

Arrange the given words in a logical and meaningful order :

- (A) Doctor
 - (B) Treatment
 - (C) Consultation
 - (D) Recovery
 - (E) Illness
- (1) (E), (A), (C), (D), (B)
 - (2) (E), (C), (A), (D), (B)
 - (3) (E), (A), (C), (B), (D)
 - (4) (D), (B), (C), (A), (E)

Options :

212807116645. 1
212807116646. 2
212807116647. 3
212807116648. 4

Question Number : 87 Question Id : 21280729162 Question Type : MCQ Option Shuffling : No Is Question Mandatory : No Calculator : None
Response Time : N.A Think Time : N.A Minimum Instruction Time : 0

Correct Marks : 5 Wrong Marks : 1

Question Key Details :

Key	Value
Comprehension	MCQ

नीचे दिए शब्दों को एक तार्किक और सार्थक क्रम में व्यवस्थित करें।

- (A) डॉक्टर
- (B) उपचार
- (C) परामर्श
- (D) आरोग्य
- (E) बीमारी

- (1) (E), (A), (C), (D), (B)
- (2) (E), (C), (A), (D), (B)
- (3) (E), (A), (C), (B), (D)
- (4) (D), (B), (C), (A), (E)

Options :

- 212807116645. 1
- 212807116646. 2
- 212807116647. 3
- 212807116648. 4


Question Number : 88 Question Id : 21280729163 Question Type : MCQ Option Shuffling : No Is Question Mandatory : No Calculator : None Response Time : N.A Think Time : N.A Minimum Instruction Time : 0





Correct Marks : 5 Wrong Marks : 1

Question Key Details :

Key	Value
Comprehension	MCQ

Which of the option figure would complete the figure matrix :



- (1) 
- (2) 
- (3) 
- (4) 

Options :

- 212807116649. 1
- 212807116650. 2
- 212807116651. 3
- 212807116652. 4

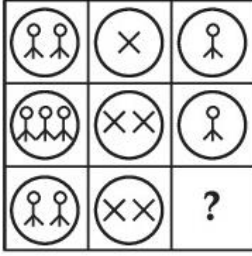
Question Number : 88 Question Id : 21280729163 Question Type : MCQ Option Shuffling : No Is Question Mandatory : No Calculator : None Response Time : N.A Think Time : N.A Minimum Instruction Time : 0

Correct Marks : 5 Wrong Marks : 1

Question Key Details :

Key	Value

कौन सी उपयुक्त आकृति इस आकृति मैट्रिक्स को पूरा करेगी।



- (1)
- (2)
- (3)
- (4)

Options :

212807116649. 1
212807116650. 2
212807116651. 3
212807116652. 4

Question Number : 89 Question Id : 21280729164 Question Type : MCQ Option Shuffling : No Is Question Mandatory : No Calculator : None Response Time : N.A Think Time : N.A Minimum Instruction Time : 0

Correct Marks : 5 Wrong Marks : 1

Question Key Details :

Key	Value
Comprehension	MCQ

In a certain code, ELEPHANT is written as QMFFUBOI. How is MALAYSIA written in that code ?

- (1) BCMOBTJZ
(2) BBMOBTJZ
(3) BBMPBTJZ
(4) BBMNBTJZ

Options :

212807116653. 1
212807116654. 2
212807116655. 3
212807116656. 4

Question Number : 89 Question Id : 21280729164 Question Type : MCQ Option Shuffling : No Is Question Mandatory : No Calculator : None Response Time : N.A Think Time : N.A Minimum Instruction Time : 0

Correct Marks : 5 Wrong Marks : 1

Question Key Details :

Key	Value
Comprehension	MCQ

एक विशिष्ट कूट में, ELEPHANT को QMFFUBOI के रूप में लिखा जाता है। उस कूट भाषा में MALAYSIA को किस प्रकार लिखा जाएगा।

- (1) BCMOBTJZ
- (2) BBMOBTJZ
- (3) BBMPBTJZ
- (4) BBMNBTJZ

Options :

212807116653. 1
 212807116654. 2
 212807116655. 3
 212807116656. 4

Question Number : 90 Question Id : 21280729165 Question Type : MCQ Option Shuffling : No Is Question Mandatory : No Calculator : None Response Time : N.A Think Time : N.A Minimum Instruction Time : 0

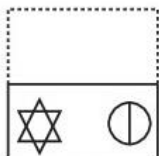
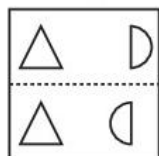
Correct Marks : 5 Wrong Marks : 1

Question Key Details :

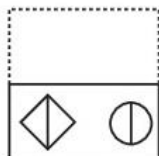
Key	Value
Comprehension	MCQ

One out of these four options resembles the figure which is obtained by folding the transparent sheet along the dotted line. Find the answer from these figures.

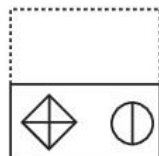
Transparent Sheet



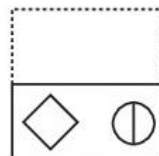
(a)



(b)



(c)



(d)

- (1) (a)
- (2) (b)
- (3) (c)
- (4) (d)

Options :

212807116657. 1
 212807116658. 2
 212807116659. 3
 212807116660. 4

Question Number : 90 Question Id : 21280729165 Question Type : MCQ Option Shuffling : No Is Question Mandatory : No Calculator : None Response Time : N.A Think Time : N.A Minimum Instruction Time : 0

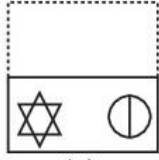
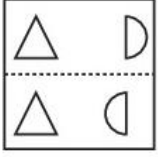
Correct Marks : 5 Wrong Marks : 1

Question Key Details :

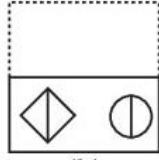
Key	Value
Comprehension	MCQ

इन विकल्पों में से वह आकृति है जो पारदर्शी शीट को बिंदुरेखा से को मोड़कर प्राप्त की जाती है वह आकृति है।

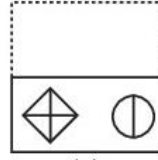
पारदर्शी शीट



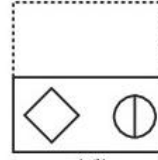
(a)



(b)



(c)



(d)

- (1) (a)
 (2) (b)
 (3) (c)
 (4) (d)

Options :

212807116657. 1
 212807116658. 2
 212807116659. 3
 212807116660. 4

Question Number : 91 Question Id : 21280729166 Question Type : MCQ Option Shuffling : No Is Question Mandatory : No Calculator : None Response Time : N.A Think Time : N.A Minimum Instruction Time : 0

Correct Marks : 5 Wrong Marks : 1

Question Key Details :

Key	Value
Comprehension	MCQ

The bank setup by BRICS countries to support and foster infrastructure and sustainable development, that is called new Development Bank [NDB]. It is located at :

- (1) Moscow, Russia
 (2) Bloemfontein, South Africa
 (3) Shanghai, China
 (4) Mumbai, India

Options :

212807116661. 1
 212807116662. 2
 212807116663. 3
 212807116664. 4

Question Number : 91 Question Id : 21280729166 Question Type : MCQ Option Shuffling : No Is Question Mandatory : No Calculator : None Response Time : N.A Think Time : N.A Minimum Instruction Time : 0

Correct Marks : 5 Wrong Marks : 1

Question Key Details :

Key	Value
Comprehension	MCQ

बुनियादी ढांचे और सतत विकास को समर्थन और बढ़ावा देने के लिए BRICS देशों द्वारा स्थापित बैंक को न्यू डेवलपमेंट बैंक [NDB] कहते हैं, यह कहाँ स्थित है ?

- (1) मास्को, रूस
 (2) ब्लूमफोर्टेन, दक्षिण अफ्रीका
 (3) शंघाई, चीन
 (4) मुंबई, भारत

Options :

212807116661. 1
 212807116662. 2

212807116663. 3
212807116664. 4

Question Number : 92 Question Id : 21280729167 Question Type : MCQ Option Shuffling : No Is Question Mandatory : No Calculator : None
Response Time : N.A Think Time : N.A Minimum Instruction Time : 0
Correct Marks : 5 Wrong Marks : 1

Question Key Details :

Key	Value
Comprehension	MCQ

Match List - I with List - II.

List - I

Metals/Non-metals

(Compounds)

(A) $\text{FeSO}_4 \cdot 4\text{H}_2\text{O}$

(B) Iodine (I_2)

(C) $\text{CaSO}_4 \cdot 2\text{H}_2\text{O}$

(D) CaCO_3

List - II

(Applications)

(I) Lime and tooth paste

(II) Cement Industry

(III) Antiseptic

(IV) Dye Industry

Choose the correct answer from the options given below :

(1) (A)-(II), (B)-(I), (C)-(IV), (D)-(III)

(2) (A)-(I), (B)-(II), (C)-(III), (D)-(IV)

(3) (A)-(III), (B)-(IV), (C)-(I), (D)-(II)

(4) (A)-(IV), (B)-(III), (C)-(II), (D)-(I)

Options :

212807116665. 1
212807116666. 2
212807116667. 3
212807116668. 4

Question Number : 92 Question Id : 21280729167 Question Type : MCQ Option Shuffling : No Is Question Mandatory : No Calculator : None
Response Time : N.A Think Time : N.A Minimum Instruction Time : 0
Correct Marks : 5 Wrong Marks : 1

Question Key Details :

Key	Value
Comprehension	MCQ

सूची-I से सूची-II का मिलान कीजिए:

सूची-I

(धात्विक/अधात्विक)

(A) $\text{FeSO}_4 \cdot 4\text{H}_2\text{O}$

(B) Iodine (I_2)

(C) $\text{CaSO}_4 \cdot 2\text{H}_2\text{O}$

(D) CaCO_3

सूची-II

(उपयोग)

(I) लाइम और दूधपेस्ट

(II) सीमेंट उद्योग

(III) एंटीसेप्टिक (रोगाणुरोधक)

(IV) डार्ई उद्योग

नीचे दिए गए विकल्पों में से सही उत्तर का चयन कीजिए:

(1) (A)-(II), (B)-(I), (C)-(IV), (D)-(III)

(2) (A)-(I), (B)-(II), (C)-(III), (D)-(IV)

(3) (A)-(IV), (B)-(IV), (C)-(I), (D)-(II)

(4) (A)-(IV), (B)-(III), (C)-(II), (D)-(I)

Options :

212807116665. 1
212807116666. 2
212807116667. 3
212807116668. 4

Question Number : 93 Question Id : 21280729168 Question Type : MCQ Option Shuffling : No Is Question Mandatory : No Calculator : None Response Time : N.A Think Time : N.A Minimum Instruction Time : 0

Correct Marks : 5 Wrong Marks : 1

Question Key Details :

Key	Value
Comprehension	MCQ

Pollution is not caused by :

- (1) Radioactive power plant
- (2) Hydroelectric power plant
- (3) Thermal power plant
- (4) Automobile

Options :

212807116669. 1
212807116670. 2
212807116671. 3
212807116672. 4

Question Number : 93 Question Id : 21280729168 Question Type : MCQ Option Shuffling : No Is Question Mandatory : No Calculator : None Response Time : N.A Think Time : N.A Minimum Instruction Time : 0

Correct Marks : 5 Wrong Marks : 1

Question Key Details :

Key	Value
Comprehension	MCQ

प्रदूषण _____ के कारण नहीं होता है।

- (1) रोडियोधर्मी ऊर्जा संयंत्र
- (2) जल विद्युत ऊर्जा संयंत्र
- (3) तापीय ऊर्जा संयंत्र
- (4) आटो मोबाइल

Options :

212807116669. 1
212807116670. 2
212807116671. 3
212807116672. 4

Question Number : 94 Question Id : 21280729169 Question Type : MCQ Option Shuffling : No Is Question Mandatory : No Calculator : None Response Time : N.A Think Time : N.A Minimum Instruction Time : 0

Correct Marks : 5 Wrong Marks : 1

Question Key Details :

Key	Value
Comprehension	MCQ

Which famous chinese writter visited India in fifth century A.D. ?

- (1) Fa-Hien
- (2) Zackma
- (3) Laotzu
- (4) Robert

Options :

212807116673. 1

212807116674. 2
212807116675. 3
212807116676. 4

Question Number : 94 Question Id : 21280729169 Question Type : MCQ Option Shuffling : No Is Question Mandatory : No Calculator : None Response Time : N.A Think Time : N.A Minimum Instruction Time : 0

Correct Marks : 5 Wrong Marks : 1

Question Key Details :

Key	Value
Comprehension	MCQ

किस प्रसिद्ध चीनी यात्री ने पाँचवी शताब्दी ईस्वी में भारत का दौरा किया।

- (1) फा-हियान
- (2) जैकमा
- (3) लाओ तजु
- (4) रोबर्ट

Options :

212807116673. 1
212807116674. 2
212807116675. 3
212807116676. 4

Question Number : 95 Question Id : 21280729170 Question Type : MCQ Option Shuffling : No Is Question Mandatory : No Calculator : None Response Time : N.A Think Time : N.A Minimum Instruction Time : 0

Correct Marks : 5 Wrong Marks : 1

Question Key Details :

Key	Value
Comprehension	MCQ

Which is the largest neighbouring country of India ?

- (1) China
- (2) Srilanka
- (3) Bangladesh
- (4) Pakistan

Options :

212807116677. 1
212807116678. 2
212807116679. 3
212807116680. 4

Question Number : 95 Question Id : 21280729170 Question Type : MCQ Option Shuffling : No Is Question Mandatory : No Calculator : None Response Time : N.A Think Time : N.A Minimum Instruction Time : 0

Correct Marks : 5 Wrong Marks : 1

Question Key Details :

Key	Value
Comprehension	MCQ

भारत का सबसे बड़ा पड़ोसी देश कौन सा है।

- (1) चीन
- (2) श्रीलंका
- (3) बांग्लादेश
- (4) पाकिस्तान

Options :

212807116677. 1
212807116678. 2

212807116679. 3
212807116680. 4

**Question Number : 96 Question Id : 21280729171 Question Type : MCQ Option Shuffling : No Is Question Mandatory : No Calculator : None
Response Time : N.A Think Time : N.A Minimum Instruction Time : 0
Correct Marks : 5 Wrong Marks : 1**

Question Key Details :

Key	Value
Comprehension	MCQ

The first manned mission by India was announced on 15 August _____ by Prime Minister of India. This mission aims to send four Indian astronauts into space :

- (1) 2018
- (2) 2019
- (3) 2020
- (4) 2021

Options :

212807116681. 1
212807116682. 2
212807116683. 3
212807116684. 4

**Question Number : 96 Question Id : 21280729171 Question Type : MCQ Option Shuffling : No Is Question Mandatory : No Calculator : None
Response Time : N.A Think Time : N.A Minimum Instruction Time : 0
Correct Marks : 5 Wrong Marks : 1**

Question Key Details :

Key	Value
Comprehension	MCQ

भारत द्वारा पहले मानव युक्त मिशन की घोषणा 15 अगस्त _____ को भारत के प्रधानमंत्री द्वारा की गई थी। इस मिशन का लक्ष्य चार भारतीय अंतरिक्ष यात्रियों का अंतरिक्ष में भेजना है।

- (1) 2018
- (2) 2019
- (3) 2020
- (4) 2021

Options :

212807116681. 1
212807116682. 2
212807116683. 3
212807116684. 4

**Question Number : 97 Question Id : 21280729172 Question Type : MCQ Option Shuffling : No Is Question Mandatory : No Calculator : None
Response Time : N.A Think Time : N.A Minimum Instruction Time : 0
Correct Marks : 5 Wrong Marks : 1**

Question Key Details :

Key	Value
Comprehension	MCQ

Kameng Elephant Reserve is located in _____.

- (1) Arunachal Pradesh
- (2) Sikkim
- (3) Nagaland
- (4) Mizoram

Options :

212807116685. 1
212807116686. 2
212807116687. 3

Question Number : 97 Question Id : 21280729172 Question Type : MCQ Option Shuffling : No Is Question Mandatory : No Calculator : None
Response Time : N.A Think Time : N.A Minimum Instruction Time : 0

Correct Marks : 5 Wrong Marks : 1

Question Key Details :

Key	Value
Comprehension	MCQ

कामेंग हाथी रिजर्व _____ में स्थित है।

- (1) अरूणाचल प्रदेश
- (2) सिक्किम
- (3) नागालैंड
- (4) मिजोरम

Options :

- 212807116685.1
212807116686.2
212807116687.3
212807116688.4

Question Number : 98 Question Id : 21280729173 Question Type : MCQ Option Shuffling : No Is Question Mandatory : No Calculator : None
Response Time : N.A Think Time : N.A Minimum Instruction Time : 0

Correct Marks : 5 Wrong Marks : 1

Question Key Details :

Key	Value
Comprehension	MCQ

Buxwaha mine is located in :

- (1) Chhatisgarh
- (2) Madhya Pradesh
- (3) Assam
- (4) Andhra Pradesh

Options :

- 212807116689.1
212807116690.2
212807116691.3
212807116692.4

Question Number : 98 Question Id : 21280729173 Question Type : MCQ Option Shuffling : No Is Question Mandatory : No Calculator : None
Response Time : N.A Think Time : N.A Minimum Instruction Time : 0

Correct Marks : 5 Wrong Marks : 1

Question Key Details :

Key	Value
Comprehension	MCQ

बक्सवाहा खदान किस राज्य में स्थित है ?

- (1) छत्तीसगढ़
- (2) मध्य प्रदेश
- (3) असम
- (4) आंध्र प्रदेश

Options :

- 212807116689.1
212807116690.2
212807116691.3

212807116692.4

Question Number : 99 Question Id : 21280729174 Question Type : MCQ Option Shuffling : No Is Question Mandatory : No Calculator : None Response Time : N.A Think Time : N.A Minimum Instruction Time : 0

Correct Marks : 5 Wrong Marks : 1

Question Key Details :

Key	Value
Comprehension	MCQ

The National Statistical Commission (NSC) was set up in _____.

- (1) 2000
- (2) 1994
- (3) 2004
- (4) 2005

Options :

212807116693.1
212807116694.2
212807116695.3
212807116696.4

Question Number : 99 Question Id : 21280729174 Question Type : MCQ Option Shuffling : No Is Question Mandatory : No Calculator : None Response Time : N.A Think Time : N.A Minimum Instruction Time : 0

Correct Marks : 5 Wrong Marks : 1

Question Key Details :

Key	Value
Comprehension	MCQ

राष्ट्रीय सांख्यिकी आयोग (NSC) _____ में स्थापित किया गया था।

- (1) 2000
- (2) 1994
- (3) 2004
- (4) 2005

Options :

212807116693.1
212807116694.2
212807116695.3
212807116696.4

Question Number : 100 Question Id : 21280729175 Question Type : MCQ Option Shuffling : No Is Question Mandatory : No Calculator : None Response Time : N.A Think Time : N.A Minimum Instruction Time : 0

Correct Marks : 5 Wrong Marks : 1

Question Key Details :

Key	Value
Comprehension	MCQ

Match List - I with List - II.

List - I	List - II
(A) Victoria	(I) Island
(B) Madagascar	(II) Lake
(C) Atlas	(III) Desert
(D) Kalahari	(IV) Mountain

Choose the **correct** answer from the options given below :

- (1) (A)-(II), (B)-(I), (C)-(IV), (D)-(III)
- (2) (A)-(I), (B)-(II), (C)-(III), (D)-(IV)
- (3) (A)-(IV), (B)-(III), (C)-(II), (D)-(I)
- (4) (A)-(III), (B)-(IV), (C)-(I), (D)-(II)

Options :

212807116697. 1
212807116698. 2
212807116699. 3
212807116700. 4

Question Number : 100 Question Id : 21280729175 Question Type : MCQ Option Shuffling : No Is Question Mandatory : No Calculator : None Response Time : N.A Think Time : N.A Minimum Instruction Time : 0

Correct Marks : 5 Wrong Marks : 1

Question Key Details :

Key	Value
Comprehension	MCQ

सूची-I से सूची-II का मिलान कीजिए:

सूची-I	सूची-II
(A) विक्टोरिया	(I) द्वीप
(B) मेडागास्कर	(II) झील
(C) एटलस	(III) मरुस्थल
(D) कालाहारी	(IV) पर्वत

नीचे दिए गए विकल्पों में से **सही उत्तर** का चयन कीजिए:

- (1) (A)-(II), (B)-(I), (C)-(IV), (D)-(III)
- (2) (A)-(I), (B)-(II), (C)-(III), (D)-(IV)
- (3) (A)-(IV), (B)-(III), (C)-(II), (D)-(I)
- (4) (A)-(III), (B)-(IV), (C)-(I), (D)-(II)

Options :

212807116697. 1
212807116698. 2
212807116699. 3
212807116700. 4

Question Number : 101 Question Id : 21280729176 Question Type : MCQ Option Shuffling : No Is Question Mandatory : No Calculator : None Response Time : N.A Think Time : N.A Minimum Instruction Time : 0

Correct Marks : 5 Wrong Marks : 1

Question Key Details :

Key	Value
Comprehension	MCQ

The permanent settlement had come into operation _____.

- (1) 1797
- (2) 1795
- (3) 1793
- (4) 1791

Options :

- 212807116701. 1
- 212807116702. 2
- 212807116703. 3
- 212807116704. 4

Question Number : 101 Question Id : 21280729176 Question Type : MCQ Option Shuffling : No Is Question Mandatory : No Calculator : None Response Time : N.A Think Time : N.A Minimum Instruction Time : 0

Correct Marks : 5 Wrong Marks : 1

Question Key Details :

Key	Value
Comprehension	MCQ

स्थायी बंदोबस्त मद (परमानेन्ट सेटलमेंट हेड) _____ में लागू हुआ था।

- (1) 1797
- (2) 1795
- (3) 1793
- (4) 1791

Options :

- 212807116701. 1
- 212807116702. 2
- 212807116703. 3
- 212807116704. 4

Question Number : 102 Question Id : 21280729177 Question Type : MCQ Option Shuffling : No Is Question Mandatory : No Calculator : None Response Time : N.A Think Time : N.A Minimum Instruction Time : 0

Correct Marks : 5 Wrong Marks : 1

Question Key Details :

Key	Value
Comprehension	MCQ

Ancient Indian Smriti texts do not include :

- (1) Sutras
- (2) Samhitas
- (3) Puranas
- (4) Ramayana

Options :

- 212807116705. 1
- 212807116706. 2
- 212807116707. 3
- 212807116708. 4

Question Number : 102 Question Id : 21280729177 Question Type : MCQ Option Shuffling : No Is Question Mandatory : No Calculator : None Response Time : N.A Think Time : N.A Minimum Instruction Time : 0

Correct Marks : 5 Wrong Marks : 1

Question Key Details :

Key	Value
Comprehension	MCQ

प्राचीन भारत के स्मृति ग्रंथों में _____ शामिल नहीं है।

- (1) सूत्र
- (2) संहिता
- (3) पुराण
- (4) रामायण

Options :

212807116705. 1
212807116706. 2
212807116707. 3
212807116708. 4

Question Number : 103 Question Id : 21280729178 Question Type : MCQ Option Shuffling : No Is Question Mandatory : No Calculator : None Response Time : N.A Think Time : N.A Minimum Instruction Time : 0

Correct Marks : 5 Wrong Marks : 1

Question Key Details :

Key	Value
Comprehension	MCQ

The tomb of famous musician 'Tansen' is located at :

- (1) Agra
- (2) Gwalior
- (3) Jhansi
- (4) Jaipur

Options :

212807116709. 1
212807116710. 2
212807116711. 3
212807116712. 4

Question Number : 103 Question Id : 21280729178 Question Type : MCQ Option Shuffling : No Is Question Mandatory : No Calculator : None Response Time : N.A Think Time : N.A Minimum Instruction Time : 0

Correct Marks : 5 Wrong Marks : 1

Question Key Details :

Key	Value
Comprehension	MCQ

प्रसिद्ध संगतिज्ञ 'तानसेन' की समाधि _____ में स्थित है।

- (1) आगरा
- (2) ग्वालियर
- (3) झांसी
- (4) जयपुर

Options :

212807116709. 1
212807116710. 2
212807116711. 3
212807116712. 4

Question Number : 104 Question Id : 21280729179 Question Type : MCQ Option Shuffling : No Is Question Mandatory : No Calculator : None Response Time : N.A Think Time : N.A Minimum Instruction Time : 0

Correct Marks : 5 Wrong Marks : 1

Question Key Details :

Key	Value
Comprehension	MCQ

Match List - I with List - II following are the Architectural Landmarks of sultan period match with correct answer.

List - I

(Structure)

- (A) Quwwat-ul-islam mosque
(B) Alai Darwaja
(C) Tughlaqabad Fort
(D) Moti ki Masjid

List - II

(Builder)

- (I) Ala-ud-din-Khilji
(II) Ghiyas-ud-din-tughlaq
(III) Qutub-ud-din-Aibak
(IV) Prime Minister of Sikandar Lodi

Choose the **correct** answer from the options given below :

- (1) (A)-(I), (B)-(III), (C)-(IV), (D)-(II)
(2) (A)-(III), (B)-(I), (C)-(II), (D)-(IV)
(3) (A)-(I), (B)-(II), (C)-(IV), (D)-(III)
(4) (A)-(III), (B)-(II), (C)-(IV), (D)-(I)

Options :

212807116713. 1
212807116714. 2
212807116715. 3
212807116716. 4

Question Number : 104 Question Id : 21280729179 Question Type : MCQ Option Shuffling : No Is Question Mandatory : No Calculator : None Response Time : N.A Think Time : N.A Minimum Instruction Time : 0

Correct Marks : 5 Wrong Marks : 1

Question Key Details :

Key	Value
Comprehension	MCQ

सूची-I सलनत काल के स्थापत्य स्थल **सूची- II** उसके निर्भाकर्ता के साथ मिलान करें।

सूची-I

(संरचना)

- (A) कुव्वत-उल-इस्लाम
(B) अलाई दरवाजा
(C) तुगलकाबाद किला
(D) मोती मास्जिद

सूची- II

(निर्माता)

- (I) अला-उद-दीन-खिल्जी
(II) गया-उद-दीन-तुगलक
(III) कुतुब-उद-दीन-ऐबक
(IV) सिंकदर लोदी का प्रधान मंत्री

नीचे दिए गए विकल्पों में से सही उत्तर का चयन चाहिए

- (1) (A)-(I), (B)-(III), (C)-(IV), (D)-(II)
(2) (A)-(III), (B)-(I), (C)-(II), (D)-(IV)
(3) (A)-(I), (B)-(II), (C)-(IV), (D)-(III)
(4) (A)-(III), (B)-(II), (C)-(IV), (D)-(I)

Options :

212807116713. 1
212807116714. 2
212807116715. 3
212807116716. 4

Question Number : 105 Question Id : 21280729180 Question Type : MCQ Option Shuffling : No Is Question Mandatory : No Calculator : None Response Time : N.A Think Time : N.A Minimum Instruction Time : 0

Correct Marks : 5 Wrong Marks : 1

Question Key Details :

Key	Value
Comprehension	MCQ

'Largest Natural Port' in India is _____.

- (1) Mumbai
- (2) Vishakhapatnam
- (3) Gujarat
- (4) West Bengal

Options :

212807116717. 1
212807116718. 2
212807116719. 3
212807116720. 4

Question Number : 105 Question Id : 21280729180 Question Type : MCQ Option Shuffling : No Is Question Mandatory : No Calculator : None Response Time : N.A Think Time : N.A Minimum Instruction Time : 0

Correct Marks : 5 Wrong Marks : 1

Question Key Details :

Key	Value
Comprehension	MCQ

भारत में सबसे बड़ा प्राकृतिक बंदरगाह _____ में स्थित है।

- (1) मुम्बई
- (2) विशाखापट्टनम
- (3) गुजरात
- (4) पश्चिम बंगाल

Options :

212807116717. 1
212807116718. 2
212807116719. 3
212807116720. 4

Question Number : 106 Question Id : 21280729181 Question Type : MCQ Option Shuffling : No Is Question Mandatory : No Calculator : None Response Time : N.A Think Time : N.A Minimum Instruction Time : 0

Correct Marks : 5 Wrong Marks : 1

Question Key Details :

Key	Value
Comprehension	MCQ

Which film won the 'Film of the Year' category award in the recent Dada Saheb Phalke National Film Festival Award 2022 ?

- (1) Shershaah
- (2) Pushpa : The Rise
- (3) KGF - 2
- (4) Tadap

Options :

212807116721. 1
212807116722. 2
212807116723. 3
212807116724. 4

Question Number : 106 Question Id : 21280729181 Question Type : MCQ Option Shuffling : No Is Question Mandatory : No Calculator : None Response Time : N.A Think Time : N.A Minimum Instruction Time : 0

Correct Marks : 5 Wrong Marks : 1

Question Key Details :

Key	Value
Comprehension	MCQ

हाल ही में दादा साहेब फाल्के राष्ट्रीय फिल्म महोत्सव पुरस्कार 2022 में किस फिल्म ने 'फिल्म ऑफ द ईयर' श्रेणी का पुरस्कार जीता ?

- (1) शेरशाह
- (2) पुष्पा: द राइज
- (3) के.जी.एफ.- 2
- (4) तड़प

Options :

212807116721. 1
212807116722. 2
212807116723. 3
212807116724. 4

Question Number : 107 Question Id : 21280729182 Question Type : MCQ Option Shuffling : No Is Question Mandatory : No Calculator : None Response Time : N.A Think Time : N.A Minimum Instruction Time : 0

Correct Marks : 5 Wrong Marks : 1

Question Key Details :

Key	Value
Comprehension	MCQ

Who won the 2022 'Jnanpith Award'

- (1) Jhumka Lahiri
- (2) Damodar Mauzo
- (3) Chitra Banerjee
- (4) Rumaan Alam

Options :

212807116725. 1
212807116726. 2
212807116727. 3
212807116728. 4

Question Number : 107 Question Id : 21280729182 Question Type : MCQ Option Shuffling : No Is Question Mandatory : No Calculator : None Response Time : N.A Think Time : N.A Minimum Instruction Time : 0

Correct Marks : 5 Wrong Marks : 1

Question Key Details :

Key	Value
Comprehension	MCQ

किसने 2022 ज्ञान पीठ पुरस्कार जीता ?

- (1) झुमका लाहिड़ी
- (2) दामोदर माऊजो
- (3) चित्रा बनर्जी
- (4) रूमान आलम

Options :

212807116725. 1
212807116726. 2
212807116727. 3
212807116728. 4

Question Number : 108 Question Id : 21280729183 Question Type : MCQ Option Shuffling : No Is Question Mandatory : No Calculator : None Response Time : N.A Think Time : N.A Minimum Instruction Time : 0

Correct Marks : 5 Wrong Marks : 1

Question Key Details :

Key	Value
Comprehension	MCQ

SI unit of mechanical energy is _____.

- (1) newton
- (2) erg
- (3) dyne-cm
- (4) joule

Options :

212807116729. 1
212807116730. 2
212807116731. 3
212807116732. 4

Question Number : 108 Question Id : 21280729183 Question Type : MCQ Option Shuffling : No Is Question Mandatory : No Calculator : None Response Time : N.A Think Time : N.A Minimum Instruction Time : 0

Correct Marks : 5 Wrong Marks : 1

Question Key Details :

Key	Value
Comprehension	MCQ

यांत्रिक ऊर्जा का SI मात्रक _____ है।

- (1) न्यूटन
- (2) अर्ग
- (3) डाइन-सेमी
- (4) जूल

Options :

212807116729. 1
212807116730. 2
212807116731. 3
212807116732. 4

Question Number : 109 Question Id : 21280729184 Question Type : MCQ Option Shuffling : No Is Question Mandatory : No Calculator : None Response Time : N.A Think Time : N.A Minimum Instruction Time : 0

Correct Marks : 5 Wrong Marks : 1

Question Key Details :

Key	Value
Comprehension	MCQ

Which banks merged in to 'Bank of Baroda' recently ?

- (1) Allahabad Bank
- (2) Andhra Bank
- (3) State Bank of Hyderabad and State Bank of Indore
- (4) Dena Bank and Vijaya Bank

Options :

212807116733. 1
212807116734. 2
212807116735. 3
212807116736. 4

Question Number : 109 Question Id : 21280729184 Question Type : MCQ Option Shuffling : No Is Question Mandatory : No Calculator : None Response Time : N.A Think Time : N.A Minimum Instruction Time : 0

Correct Marks : 5 Wrong Marks : 1

Question Key Details :

Key	Value
-----	-------

हाल ही में कौन सा बैंक, बैंक ऑफ बड़ौदा में विलय हुआ।

- (1) इलाहाबाद बैंक
- (2) आंध्रा बैंक
- (3) स्टेट बैंक ऑफ हैदराबाद और स्टेट बैंक ऑफ इंदौर
- (4) देना बैंक और विजया बैंक

Options :

212807116733. 1
212807116734. 2
212807116735. 3
212807116736. 4

Question Number : 110 Question Id : 21280729185 Question Type : MCQ Option Shuffling : No Is Question Mandatory : No Calculator : None Response Time : N.A Think Time : N.A Minimum Instruction Time : 0

Correct Marks : 5 Wrong Marks : 1

Question Key Details :

Key	Value
Comprehension	MCQ

Which country of the world won the FIFA world cup maximum number of times ?

- (1) Brazil
- (2) France
- (3) Argentina
- (4) U.S.A

Options :

212807116737. 1
212807116738. 2
212807116739. 3
212807116740. 4

Question Number : 110 Question Id : 21280729185 Question Type : MCQ Option Shuffling : No Is Question Mandatory : No Calculator : None Response Time : N.A Think Time : N.A Minimum Instruction Time : 0

Correct Marks : 5 Wrong Marks : 1

Question Key Details :

Key	Value
Comprehension	MCQ

विश्व के किस देश ने सबसे अधिक बार FIFA विश्व कप जीता है ?

- (1) ब्राजील
- (2) फ्रांस
- (3) अर्जेंटिना
- (4) यू.एस.ए.

Options :

212807116737. 1
212807116738. 2
212807116739. 3
212807116740. 4