

پانچویں رپورٹ سے لئے گئے اقتباس کو پڑھیں اور سوالات کا جواب دیں۔

زمیندار کی حالت اور زمین کی نیلامی کا حوالہ دیتے ہوئے رپورٹ کہتا ہے:

زمینی منافع پابندی سے نہیں نکالا گیا اور عام طور سے زمینوں کی نیلامی کی گئی وہی سال 1203 بمطابق 97-1796 زمین جو سیل کے لگائی گئی اس کا اندازاً ہم (Jumm) 20,70,061 سکہ روپیہ تھا۔ جبکہ اصل زمین کی فروخت جو ہم (Jumm) پر مشتمل تھی وہ اندازاً 14,10,756 تھا اور جو بیسہ سکا اس کے فروخت کرنے پر لیا وہ تقریباً 17,90,416 تھا۔

1204 بمطابق 90-1797 میں زمین اشتہار کی گئی۔ 22,66,191 کے روپیہ (سکا) کے لئے اس میں 22,74,076 روپے لئے گئے۔

ڈیٹا لٹرز میں ملک کی کچھ بڑے پرانے خاندان تھے جیسے کہ راجہ نو دلہر (Nudeler) راجپوت اور بسین پور، بنگال کے تمام اضلاع اور کچھ علاوہ جن کی ریاستیں الگ الگ شتم ہو گئی اور ہر آنے والے سال فرسبی نے دستک دی۔ اور کسی حد تک دیو پو آ میسر کے لئے مشکل ہو گیا کہ وہ کم نہ ہونے والے عوامی مالیت کی حفاظت کر سکیں۔ پانچویں رپورٹ اس کی پیداوار تھی۔

(1) برطانوی رانی

(2) ایک مخصوص کمیٹی

(3) ہندوستانی زمینداروں کی ایک کمیٹی

(4) برطانوی راج

Options :

112807119377 1

112807119378 2

112807119379 3

112807119380 4

General Test

Group Number :	0
Group Id :	212807645
Group Maximum Duration :	60
Group Minimum Duration :	60
Show Attended Group? :	No
Edit Attended Group? :	No
Break time :	0
Group Marks :	250
Is this Group for Examiner? :	No
Examiner permission :	Can View
Show Progress Bar? :	No

General Test

Section Id :	212807783
Section Number :	1
Section type :	Online
Mandatory or Optional :	Mandatory
Number of Questions :	60
Number of Questions to be attempted :	60
Section Marks :	250
Enable Mark as Answered Mark for Review and Clear Response :	Yes
Maximum Instruction Time :	0
Sub-Section Number :	1

Sub-Section Id :

2128072165

Question Shuffling Allowed :

Yes

Is Section Default? :

null

Question Number : 251 Question Id : 21280729736 Question Type : MCQ Option Shuffling : No Is Question Mandatory : No Calculator : None
Response Time : N.A Think Time : N.A Minimum Instruction Time : 0

Correct Marks : 5 Wrong Marks : 1

Question Key Details :

Key	Value
Comprehension	MCQ

If x is inversely proportional to y and y is directly proportional to z , then xz is :

- (1) Directly proportional to y
- (2) Inversely proportional to y
- (3) Constant
- (4) Directly proportional to y^2

Options :

212807118941 1

212807118942 2

212807118943 3

212807118944 4

Question Number : 251 Question Id : 21280729736 Question Type : MCQ Option Shuffling : No Is Question Mandatory : No Calculator : None
Response Time : N.A Think Time : N.A Minimum Instruction Time : 0

Correct Marks : 5 Wrong Marks : 1

Question Key Details :

Key	Value
Comprehension	MCQ

यदि x, y का व्युत्क्रमानुपाती है और y, z का अनुक्रमानुपाती है तो xz है।

- (1) y का अनुक्रमानुपाती
- (2) y का व्युत्क्रमानुपाती
- (3) नियतांक
- (4) y^2 का अनुक्रमानुपाती

Options :

212807118941 1

212807118942 2

212807118943 3

212807118944 4

Question Number : 251 Question Id : 21280729736 Question Type : MCQ Option Shuffling : No Is Question Mandatory : No Calculator : None
Response Time : N.A Think Time : N.A Minimum Instruction Time : 0

Correct Marks : 5 Wrong Marks : 1

Question Key Details :

Key	Value
Comprehension	MCQ

यदि x, y व y, z व व्युत्क्रमानुपातिक और y, z व समानुपातिक, तब xz है।

- (1) प्रत्यक्षतः y व समानुपातिक
- (2) y व व्युत्क्रमानुपातिक
- (3) शून्य
- (4) y^2 व समानुपातिक

Options :

212807118941 1
212807118942 2
212807118943 3
212807118944 4

Question Number : 251 Question Id : 21280729736 Question Type : MCQ Option Shuffling : No Is Question Mandatory : No Calculator : None
Response Time : N.A Think Time : N.A Minimum Instruction Time : 0

Correct Marks : 5 Wrong Marks : 1

Question Key Details :

Key	Value
Comprehension	MCQ

যদি x -এর সাথে y বাস্তবসুপাত y , z -এর সমানুপাত থেকে তাহলে xz হল —

- (1) y -এর সাথে সমানুপাত
- (2) y -এর বাস্তবসুপাত
- (3) ধ্রুবক
- (4) y^2 -এর সমানুপাত

Options :

212807118941 1
212807118942 2
212807118943 3
212807118944 4

Question Number : 251 Question Id : 21280729736 Question Type : MCQ Option Shuffling : No Is Question Mandatory : No Calculator : None
Response Time : N.A Think Time : N.A Minimum Instruction Time : 0

Correct Marks : 5 Wrong Marks : 1

Question Key Details :

Key	Value
Comprehension	MCQ

যদি x ও y না ব্যস্তপ্রমাণেরা হইলে y ও z না সমপ্রমাণেরা হইলে তাহলে xz হইবে —

- (1) y না সমপ্রমাণেরা
- (2) y না ব্যস্তপ্রমাণেরা
- (3) অমূল্য
- (4) y^2 না সমপ্রমাণেরা

Options :

212807118941 1
212807118942 2
212807118943 3
212807118944 4

Question Number : 251 Question Id : 21280729736 Question Type : MCQ Option Shuffling : No Is Question Mandatory : No Calculator : None
Response Time : N.A Think Time : N.A Minimum Instruction Time : 0

Correct Marks : 5 Wrong Marks : 1

Question Key Details :

Key	Value
Comprehension	MCQ

x യും y ന്റെ അനുലോമം അനുപാതവാദരും y യും z ന്റെ വിಲോമം അനുപാതവാദരും ആ xz യും :

- (1) y ന്റെ വിലോമം അനുപാതവാദരും.
- (2) y ന്റെ അനുലോമം അനുപാതവാദരും.
- (3) സ്ഥിരം.
- (4) y^2 ന്റെ വിലോമം അനുപാതവാദരും.

Options :

- 212807118941 1
- 212807118942 2
- 212807118943 3
- 212807118944 4

Question Number : 251 Question Id : 21280729736 Question Type : MCQ Option Shuffling : No Is Question Mandatory : No Calculator : None

Response Time : N.A Think Time : N.A Minimum Instruction Time : 0

Correct Marks : 5 Wrong Marks : 1

Question Key Details :

Key	Value
Comprehension	MCQ

അ x ന്റെ y ന്റെ വ്യക്തം പ്രമാണിതം അല്ലെങ്കിൽ y ന്റെ z ന്റെ വ്യക്തം പ്രമാണിതം അല്ലെങ്കിൽ, xz ന്റെ :

- (1) y ന്റെ വ്യക്തം പ്രമാണിതം അല്ലെങ്കിൽ
- (2) y ന്റെ വ്യക്തം പ്രമാണിതം അല്ലെങ്കിൽ
- (3) സ്ഥിരം
- (4) y^2 ന്റെ വ്യക്തം പ്രമാണിതം അല്ലെങ്കിൽ

Options :

- 212807118941 1
- 212807118942 2
- 212807118943 3
- 212807118944 4

Question Number : 251 Question Id : 21280729736 Question Type : MCQ Option Shuffling : No Is Question Mandatory : No Calculator : None

Response Time : N.A Think Time : N.A Minimum Instruction Time : 0

Correct Marks : 5 Wrong Marks : 1

Question Key Details :

Key	Value
Comprehension	MCQ

x , y യുമായി വിപരീത അനുപാതത്തിലും y , z യുമായി നേരി അനുപാതത്തിലും ആണെങ്കിൽ, xz ന്റെ :

- (1) y യുമായി നേരി അനുപാതത്തിൽ
- (2) y യുമായി വിപരീത അനുപാതത്തിൽ
- (3) കോൺസ്റ്റന്റ്
- (4) y^2 യുമായി നേരി അനുപാതത്തിൽ

Options :

- 212807118941 1
- 212807118942 2
- 212807118943 3
- 212807118944 4

Question Number : 251 Question Id : 21280729736 Question Type : MCQ Option Shuffling : No Is Question Mandatory : No Calculator : None

Response Time : N.A Think Time : N.A Minimum Instruction Time : 0

Correct Marks : 5 Wrong Marks : 1

Question Key Details :

Key	Value
Comprehension	MCQ

ଯଦି x, y ସହିତ ପ୍ରତିଲୋମ ସମାନୁପାତି (inversely proportional) ଏବଂ y, z ସହିତ ସମାନୁପାତି, ତାହାହେଲେ xz କ'ଣ ହେବ ?

- (1) y ସହିତ ସମାନୁପାତି
- (2) y ସହିତ ପ୍ରତିଲୋମ ସମାନୁପାତି
- (3) ଧୂଳି
- (4) y^2 ସହିତ ସମାନୁପାତି

Options :

212807118941 1
212807118942 2
212807118943 3
212807118944 4

Question Number : 251 Question Id : 21280729736 Question Type : MCQ Option Shuffling : No Is Question Mandatory : No Calculator : None
Response Time : N.A Think Time : N.A Minimum Instruction Time : 0

Correct Marks : 5 Wrong Marks : 1

Question Key Details :

Key	Value
Comprehension	MCQ

ନେକ x, y ଦି ଉଲଟ ଅନୁପାତୀ ହିଁ ଓ y ସିଂଘି ଡିଟ ଓ z ଦି ଅନୁପାତୀ ହିଁ ଓ xz ହିଁ :

- (1) ସିଂଘି y ଦି ଅନୁପାତୀ ହିଁ ।
- (2) ଉଲଟା y ଦି ଅନୁପାତୀ ହିଁ ।
- (3) ଧିକା/ଘିକା
- (4) y^2 ଦା ସିଂଘା ଅନୁପାତୀ ହିଁ ।

Options :

212807118941 1
212807118942 2
212807118943 3
212807118944 4

Question Number : 251 Question Id : 21280729736 Question Type : MCQ Option Shuffling : No Is Question Mandatory : No Calculator : None
Response Time : N.A Think Time : N.A Minimum Instruction Time : 0

Correct Marks : 5 Wrong Marks : 1

Question Key Details :

Key	Value
Comprehension	MCQ

x ଶନ୍ଧପତୁ y କ୍ତୁ ନେର୍ଯ୍ୟାହାନ୍ ଶିକିତାସାଫତ୍ତିଲୁଂ , y ଶନ୍ଧପତୁ z କ୍ତୁ ନେର୍ ଶିକିତାସାଫତ୍ତିଲୁଂ ଇନ୍ଦ୍ରନ୍ତାଲ୍, xz ଶନ୍ଧପତୁ :

- (1) y କ୍ତୁ ନେର୍ ଶିକିତାସାଫତ୍ତିଲ୍
- (2) y କ୍ତୁ ନେର୍ଯ୍ୟାହାନ୍ ଶିକିତାସାଫତ୍ତିଲ୍
- (3) ନିଶାଲ ଶନ୍ଧ
- (4) y^2 କ୍ତୁ ନେର୍ ଶିକିତାସାଫତ୍ତିଲ୍

Options :

212807118941 1

212807118941 1
212807118943 3
212807118944 4

Question Number : 251 Question Id : 21280729736 Question Type : MCQ Option Shuffling : No Is Question Mandatory : No Calculator : None
Response Time : N.A Think Time : N.A Minimum Instruction Time : 0

Correct Marks : 5 Wrong Marks : 1

Question Key Details :

Key	Value
Comprehension	MCQ

ఒకవేళ y కి x విలోమానుపాతంలో మరియు z కి y అనులోమానుపాతంలో ఉంటే x : అనేది :

- (1) y కి అనులోమానుపాతంలో ఉంటుంది
- (2) y కి విలోమానుపాతంలో ఉంటుంది
- (3) స్థిరాంకం
- (4) y^2 కి అనులోమానుపాతంలో ఉంటుంది

Options :

212807118941 1
212807118942 2
212807118943 3
212807118944 4

Question Number : 251 Question Id : 21280729736 Question Type : MCQ Option Shuffling : No Is Question Mandatory : No Calculator : None
Response Time : N.A Think Time : N.A Minimum Instruction Time : 0

Correct Marks : 5 Wrong Marks : 1

Question Key Details :

Key	Value
Comprehension	MCQ

అگر x متضاد کتاب ہے y کے لیے اور y براہ راست کتاب ہے z کے لیے تو x :

- (1) y کے لیے براہ راست کتاب
- (2) y کے لیے متضاد کتاب
- (3) مستقل
- (4) y^2 کے لیے براہ راست کتاب

Options :

212807118941 1
212807118942 2
212807118943 3
212807118944 4

Question Number : 251 Question Id : 21280729737 Question Type : MCQ Option Shuffling : No Is Question Mandatory : No Calculator : None
Response Time : N.A Think Time : N.A Minimum Instruction Time : 0

Correct Marks : 5 Wrong Marks : 1

Question Key Details :

Key	Value
Comprehension	MCQ

Find the fraction which bears the same ratio to $\frac{1}{27}$ that $\frac{3}{11}$ does to $\frac{5}{9}$.

(1) $\frac{15}{99}$

(2) $\frac{1}{729}$

(3) $\frac{1}{55}$

(4) $\frac{33}{40}$

Options :

112807118945.1

112807118946.2

112807118947.3

112807118948.4

Question Number : 252 Question Id : 21280729737 Question Type : MCQ Option Shuffling : No Is Question Mandatory : No Calculator : None
Response Time : N.A Think Time : N.A Minimum Instruction Time : 0

Correct Marks : 5 Wrong Marks : 1

Question Key Details :

Key	Value
Comprehension	MCQ

ऐसी भिन्न ज्ञात कीजिए जिसका $\frac{1}{27}$ के साथ वही अनुपात है, जो $\frac{3}{11}$ का $\frac{5}{9}$ के साथ है।

(1) $\frac{15}{99}$

(2) $\frac{1}{729}$

(3) $\frac{1}{55}$

(4) $\frac{33}{40}$

Options :

112807118945.1

112807118946.2

112807118947.3

112807118948.4

Question Number : 252 Question Id : 21280729737 Question Type : MCQ Option Shuffling : No Is Question Mandatory : No Calculator : None
Response Time : N.A Think Time : N.A Minimum Instruction Time : 0

Correct Marks : 5 Wrong Marks : 1

Question Key Details :

Key	Value
Comprehension	MCQ

$\frac{1}{27}$, $\frac{3}{11}$ বা $\frac{5}{9}$ ৰ লগত যি অনুপাত সেই একে অনুপাত বহন কৰা ভগ্নাংশটো হৈছে :

(1) $\frac{15}{99}$

(2) $\frac{1}{729}$

(3) $\frac{1}{55}$

(4) $\frac{33}{40}$

Options :

212807118945 1

212807118946 2

212807118947 3

212807118948 4

Question Number : 252 Question Id : 21280719737 Question Type : MCQ Option Shuffling : No Is Question Mandatory : No Calculator : None
Response Time : N.A Think Time : N.A Minimum Instruction Time : 0

Correct Marks : 5 Wrong Marks : 1

Question Key Details :

Key	Value
Comprehension	MCQ

যে ভগ্নাংশটি $\frac{1}{27}$ -এৰ সৈতে একেই অনুপাত বহন কৰে যা $\frac{3}{11}$ -এৰ সৈতে $\frac{5}{9}$ -এৰ অনুপাত সম্পর্কিত তা নিৰ্ণয় কৰো।

(1) $\frac{15}{99}$

(2) $\frac{1}{729}$

(3) $\frac{1}{55}$

(4) $\frac{33}{40}$

Options :

212807118945 1

212807118946 2

212807118947 3

212807118948 4

Question Number : 252 Question Id : 21280719737 Question Type : MCQ Option Shuffling : No Is Question Mandatory : No Calculator : None
Response Time : N.A Think Time : N.A Minimum Instruction Time : 0

Correct Marks : 5 Wrong Marks : 1

Question Key Details :

Key	Value
Comprehension	MCQ

ಇಂ ಗುಣೋತ್ತರ $\frac{3}{11}$ ನೊ $\frac{5}{9}$ ಥೊ ಲೆ, ತೊ $\frac{1}{27}$ ನೊ ಸಮಾನ ಗುಣೋತ್ತರ ಖರಾವಲೊ ಭಾಗ ಸೊಧೊ.

(1) $\frac{15}{99}$

(2) $\frac{1}{729}$

(3) $\frac{1}{55}$

(4) $\frac{33}{40}$

Options :

212807118945 1

212807118946 2

212807118947 3

212807118948 4

Question Number : 251 Question Id : 21280719737 Question Type : MCQ Option Shuffling : No Is Question Mandatory : No Calculator : None
Response Time : N.A Think Time : N.A Minimum Instruction Time : 0

Correct Marks : 5 Wrong Marks : 1

Question Key Details :

Key	Value
Comprehension	MCQ

$\frac{3}{11}$ ಯು $\frac{5}{9}$ ನೊ ಮೂಡುವ ಉತಿಯಲ್ಲೆ: $\frac{1}{27}$ ಕ್ಕಿರುವ ಒಂದೆ ಆನುಪಾತದ ಭಿನ್ನಾಂಕವನ್ನು ಪತ್ತೆ ಹಚ್ಚಿ

(1) $\frac{15}{99}$

(2) $\frac{1}{729}$

(3) $\frac{1}{55}$

(4) $\frac{33}{40}$

Options :

212807118945 1

212807118946 2

212807118947 3

212807118948 4

Question Number : 252 Question Id : 21280719737 Question Type : MCQ Option Shuffling : No Is Question Mandatory : No Calculator : None
Response Time : N.A Think Time : N.A Minimum Instruction Time : 0

Correct Marks : 5 Wrong Marks : 1

Question Key Details :

Key	Value
Comprehension	MCQ

$\frac{3}{11}$ चे $\frac{5}{9}$ शी जे गुणोत्तर आहे, तसेच समान गुणोत्तर $\frac{1}{27}$ शी असणारा अपूर्णांक शोधा.

(1) $\frac{15}{99}$

(2) $\frac{1}{729}$

(3) $\frac{1}{55}$

(4) $\frac{33}{40}$

Options :

212807118945 1

212807118946 2

212807118947 3

212807118948 4

Question Number : 252 Question Id : 21280729737 Question Type : MCQ Option Shuffling : No Is Question Mandatory : No Calculator : None
Response Time : N.A Think Time : N.A Minimum Instruction Time : 0

Correct Marks : 5 Wrong Marks : 1

Question Key Details :

Key	Value
Comprehension	MCQ

$\frac{3}{11}$ $\frac{5}{9}$ എന്നീ दोन सख्यांकळीं तळील्ले अशेच अणुपाठो $\frac{1}{27}$ मळीं उल्लेखील्ले दोनसुंय तळोच तळीरिळुणुणुतळीं नुीरुं कळोळणुणुक.

(1) $\frac{15}{99}$

(2) $\frac{1}{729}$

(3) $\frac{1}{55}$

(4) $\frac{33}{40}$

Options :

212807118945 1

212807118946 2

212807118947 3

212807118948 4

Question Number : 252 Question Id : 21280729737 Question Type : MCQ Option Shuffling : No Is Question Mandatory : No Calculator : None
Response Time : N.A Think Time : N.A Minimum Instruction Time : 0

Correct Marks : 5 Wrong Marks : 1

Question Key Details :

Key	Value
Comprehension	MCQ

ਕੁਝਾੜੀਂ ਵਾਜਾਜਿ ਕਰਨੂ ਯਾਤਾ $\frac{1}{27}$ ਭਵਿਚਿ ਓਮਾਲ ਅਨੁਪਾਤਕਲੇ ਠਾੜ ਕਲੇਠਿਓ $\frac{5}{9}$, $\frac{3}{11}$ ਭਵਿਚਿ ਕਲੇਠਿਓ ।

(1) $\frac{15}{99}$

(2) $\frac{1}{729}$

(3) $\frac{1}{55}$

(4) $\frac{33}{40}$

Options :

212807118945 1

212807118946 2

212807118947 3

212807118948 4

Question Number : 252 Question Id : 21280719737 Question Type : MCQ Option Shuffling : No Is Question Mandatory : No Calculator : None
Response Time : N.A Think Time : N.A Minimum Instruction Time : 0

Correct Marks : 5 Wrong Marks : 1

Question Key Details :

Key	Value
Comprehension	MCQ

ਉਹ ਅੰਸ਼ ਲੱਭੋ ਜੋ $\frac{1}{27}$ ਦਾ ਉਹੀ ਅਨੁਪਾਤ ਰੱਖਦਾ ਹੈ ਜੋ $\frac{3}{11}$ ਦਾ $\frac{5}{9}$ ਹੁੰਦਾ ਹੈ ।

(1) $\frac{15}{99}$

(2) $\frac{1}{729}$

(3) $\frac{1}{55}$

(4) $\frac{33}{40}$

Options :

212807118945 1

212807118946 2

212807118947 3

212807118948 4

Question Number : 252 Question Id : 21280719737 Question Type : MCQ Option Shuffling : No Is Question Mandatory : No Calculator : None
Response Time : N.A Think Time : N.A Minimum Instruction Time : 0

Correct Marks : 5 Wrong Marks : 1

Question Key Details :

Key	Value
Comprehension	MCQ

இதற்கு இணையான விகிதத்தைக் கொண்ட பகுதியைக் கண்டறியவும் $\frac{1}{27}$.

$$\frac{3}{11} \frac{5}{9}$$

(1) $\frac{15}{99}$

(2) $\frac{1}{729}$

(3) $\frac{1}{55}$

(4) $\frac{33}{40}$

Options :

212807118945-1

212807118946-2

212807118947-3

212807118948-4

Question Number : 252 Question Id : 21280719737 Question Type : MCQ Option Shuffling : No Is Question Mandatory : No Calculator : None
Response Time : N.A Think Time : N.A Minimum Instruction Time : 0

Correct Marks : 5 Wrong Marks : 1

Question Key Details :

Key	Value
Comprehension	MCQ

$\frac{1}{27}$ க்கு $\frac{3}{11}$ గల నిష్పత్తికి సమాన భిన్నాన్ని $\frac{5}{9}$ కి ఏ భిన్నం చేస్తుంది ?

(1) $\frac{15}{99}$

(2) $\frac{1}{729}$

(3) $\frac{1}{55}$

(4) $\frac{33}{40}$

Options :

212807118945-1

212807118946-2

212807118947-3

212807118948-4

Question Number : 252 Question Id : 21280719737 Question Type : MCQ Option Shuffling : No Is Question Mandatory : No Calculator : None
Response Time : N.A Think Time : N.A Minimum Instruction Time : 0

Correct Marks : 5 Wrong Marks : 1

Question Key Details :

Key	Value
Comprehension	MCQ

اُس کس کی تلاش کریں جو $\frac{1}{27}$ کا وہی شرح رکھتا ہے جو $\frac{3}{11}$ کے لیے رکھتا ہے ؟

$$\frac{15}{99} \quad (1)$$

$$\frac{1}{729} \quad (2)$$

$$\frac{1}{55} \quad (3)$$

$$\frac{33}{40} \quad (4)$$

Options :

212807118945 1

212807118946 2

212807118947 3

212807118948 4

Question Number : 253 Question Id : 21280719735 Question Type : MCQ Option Shuffling : No Is Question Mandatory : No Calculator : None
Response Time : N.A Think Time : N.A Minimum Instruction Time : 0

Correct Marks : 5 Wrong Marks : 1

Question Key Details :

Key	Value
Comprehension	MCQ

Shaloo sold a mobile phone for ₹ 1,950 at a loss of 25%. At what price should she have sold it to get a profit of 30% ?

(1) ₹ 3,380

(2) ₹ 3,280

(3) ₹ 3,180

(4) ₹ 3,080

Options :

212807118949 1

212807118950 2

212807118951 3

212807118952 4

Question Number : 253 Question Id : 21280719735 Question Type : MCQ Option Shuffling : No Is Question Mandatory : No Calculator : None
Response Time : N.A Think Time : N.A Minimum Instruction Time : 0

Correct Marks : 5 Wrong Marks : 1

Question Key Details :

Key	Value
Comprehension	MCQ

शालू ने एक मोबाइल फोन 25% हानि पर ₹ 1950 में बेचा। 30% लाभ प्राप्त करने के लिए उसे फोन कितने में बेचना चाहिए था ?

(1) ₹ 3380

(2) ₹ 3280

(3) ₹ 3180

(4) ₹ 3080

Options :

212807118949 1

212807118950 2

212807118951 3

212807118952 4

Question Number : 253 Question Id : 212807189738 Question Type : MCQ Option Shuffling : No Is Question Mandatory : No Calculator : None
Response Time : N.A Think Time : N.A Minimum Instruction Time : 0

Correct Marks : 5 Wrong Marks : 1

Question Key Details :

Key	Value
Comprehension	MCQ

શ્રાવણે 25% લોકચાનક એટા મોબાઈલ મેકા 1950 ટકાત વિક્રી કરીલે. 30% લાભ પાલે તાઈ મોબાઈલટો કિ લામત વિક્રી કરીલ લાગિલ ?

- (1) ₹ 3380
- (2) ₹ 3280
- (3) ₹ 3180
- (4) ₹ 3080

Options :

- 21280718949 1
21280718950 2
21280718951 3
21280718952 4

Question Number : 253 Question Id : 212807189738 Question Type : MCQ Option Shuffling : No Is Question Mandatory : No Calculator : None
Response Time : N.A Think Time : N.A Minimum Instruction Time : 0

Correct Marks : 5 Wrong Marks : 1

Question Key Details :

Key	Value
Comprehension	MCQ

શાકુ 1950 ટાકાચ ઁકાટી મોબાઈલ વિક્રિ કરલે 25% લાભ હચ. કાક ટાકાચ વિક્રિ કરલે તાચ 30% લાભ હલે ?

- (1) ₹ 3380
- (2) ₹ 3280
- (3) ₹ 3180
- (4) ₹ 3080

Options :

- 21280718949 1
21280718950 2
21280718951 3
21280718952 4

Question Number : 253 Question Id : 212807189738 Question Type : MCQ Option Shuffling : No Is Question Mandatory : No Calculator : None
Response Time : N.A Think Time : N.A Minimum Instruction Time : 0

Correct Marks : 5 Wrong Marks : 1

Question Key Details :

Key	Value
Comprehension	MCQ

શાલુ ઁ 25% લા નુકલાને ₹ 1950 માં મોબાઈલ ફોન વેચ્યો, 30% લાકો મેળવવા માટે તેણીઁ તેને કેટલી કિલતે વેચ્યો હતો?

- (1) ₹ 3380
- (2) ₹ 3280
- (3) ₹ 3180
- (4) ₹ 3080

Options :

- 21280718949 1
21280718950 2
21280718951 3

212807118949 1
212807118950 2
212807118951 3
212807118952 4

Question Number : 253 Question Id : 21280719735 Question Type : MCQ Option Shuffling : No Is Question Mandatory : No Calculator : None
Response Time : N.A Think Time : N.A Minimum Instruction Time : 0

Correct Marks : 5 Wrong Marks : 1

Question Key Details :

Key	Value
Comprehension	MCQ

25% ਖਰਚ ਕਰਨ ਨੂੰ ਬਾਕੀ ਗੋਲੀ-ਘ ਮੋਮਾਗਾਜ਼ਲ ਯੋਗਕਰਮ ₹ 1950 ਚੱਕਾਗੇ ਹਿੱਸੇ ਕਰਾ। ਕੇਵਲੇ ਸੂਚਕਾਗੇ ਚੇ ਵਧਾਕੂ ਹਿੱਸੇ ਕਰੇਲ
30% ਗਾਕ ਚਾਕਕ ?

- (1) ₹ 3380
- (2) ₹ 3280
- (3) ₹ 3180
- (4) ₹ 3080

Options :

212807118949 1
212807118950 2
212807118951 3
212807118952 4

Question Number : 253 Question Id : 21280719735 Question Type : MCQ Option Shuffling : No Is Question Mandatory : No Calculator : None
Response Time : N.A Think Time : N.A Minimum Instruction Time : 0

Correct Marks : 5 Wrong Marks : 1

Question Key Details :

Key	Value
Comprehension	MCQ

ਸਾਲੂ ਨੇ 25% ਦੇ ਘਾਟੇ ਵਿਚ 1950 ਰੁਪਏ ਵਿਚ ਇਕ ਮੋਥਾਈਲ ਫੋਨ ਵੇਚਿਆ। 30% ਦਾ ਮੁਨਾਫਾ ਲੈਣ ਲਈ ਉਸਨੂੰ ਕਿਸ
ਕੀਮਤ ਤੇ ਵੇਚਣਾ ਚਾਹੀਦਾ ਸੀ?

- (1) 3380 ਰੁਪਏ
- (2) 3280 ਰੁਪਏ
- (3) 3180 ਰੁਪਏ
- (4) 3080 ਰੁਪਏ

Options :

212807118949 1
212807118950 2
212807118951 3
212807118952 4

Question Number : 253 Question Id : 21280719735 Question Type : MCQ Option Shuffling : No Is Question Mandatory : No Calculator : None
Response Time : N.A Think Time : N.A Minimum Instruction Time : 0

Correct Marks : 5 Wrong Marks : 1

Question Key Details :

Key	Value
Comprehension	MCQ

ಖರಾಬ ₹ 1950 ஆம் ஆண்டில் 25% நஷ்டத்தில் ஒரு மொபைல் போனை விற்கார். 30% இலாபம் பெற அவள் அதை என்ன விலைக்கு விற்கிறாள்?

- (1) ₹ 3380
- (2) ₹ 3280
- (3) ₹ 3180
- (4) ₹ 3080

Options :

- 212807118949 1
212807118950 2
212807118951 3
212807118952 4

Question Number : 253 Question Id : 21280729738 Question Type : MCQ Option Skuffling : No Is Question Mandatory : No Calculator : None Response Time : N.A Think Time : N.A Minimum Instruction Time : 0

Correct Marks : 5 Wrong Marks : 1

Question Key Details :

Key	Value
Comprehension	MCQ

ಪೌಲು ಒಬ್ಬ ಮೊಬೈಲ್‌ಫೋನ್‌ನ 25% ನಷ್ಟంతో ₹ 1950 ಕೆ ವಿಕ್ರಯಿಸಿ. ತನು 30% ಲಾಭಂ ಪಂದೆಲ್ ವಿ ಧರತಿ ವಿಕ್ರಯಿಸಾಲಿ ?

- (1) ₹ 3380
- (2) ₹ 3280
- (3) ₹ 3180
- (4) ₹ 3080

Options :

- 212807118949 1
212807118950 2
212807118951 3
212807118952 4

Question Number : 253 Question Id : 21280729738 Question Type : MCQ Option Skuffling : No Is Question Mandatory : No Calculator : None Response Time : N.A Think Time : N.A Minimum Instruction Time : 0

Correct Marks : 5 Wrong Marks : 1

Question Key Details :

Key	Value
Comprehension	MCQ

شالو ایک موبائل فون 25% نقصان کے ساتھ 1950 روپے پر بیچنا ہے۔ کسی قیمت پر اسے بیچا ہے 30% فیصد کا فائدہ پانے کے لئے ؟

- (1) 3380 روپے
- (2) 3280 روپے
- (3) 3180 روپے
- (4) 3080 روپے

Options :

- 212807118949 1
212807118950 2
212807118951 3

212507118953-4

Question Number : 254 Question Id : 21280719739 Question Type : MCQ Option Shuffling : No Is Question Mandatory : No Calculator : None
Response Time : N.A Think Time : N.A Minimum Instruction Time : 0

Correct Marks : 5 Wrong Marks : 1

Question Key Details :

Key	Value
Comprehension	MCQ

220% of a number P is 44. What is 44% of P ?

- (1) 88
- (2) 8.8
- (3) 880
- (4) 0.88

Options :

212507118953-1

212807118954-1

212507118953-3

212807118954-4

Question Number : 254 Question Id : 21280719739 Question Type : MCQ Option Shuffling : No Is Question Mandatory : No Calculator : None
Response Time : N.A Think Time : N.A Minimum Instruction Time : 0

Correct Marks : 5 Wrong Marks : 1

Question Key Details :

Key	Value
Comprehension	MCQ

किसी संख्या P का 220 % 44 है। P का 44 % क्या है ?

- (1) 88
- (2) 8.8
- (3) 880
- (4) 0.88

Options :

212507118953-1

212807118954-1

212507118953-3

212807118954-4

Question Number : 254 Question Id : 21280719739 Question Type : MCQ Option Shuffling : No Is Question Mandatory : No Calculator : None
Response Time : N.A Think Time : N.A Minimum Instruction Time : 0

Correct Marks : 5 Wrong Marks : 1

Question Key Details :

Key	Value
Comprehension	MCQ

'P' সংখ্যার 220% হৈছে 44। তেহে 'P' 44% কিমান হ'ব ?

- (1) 88
- (2) 8.8
- (3) 880
- (4) 0.88

Options :

212807118953-1

212507118954-1

212807118953-3

212807118954-4

Question Number : 254 Question Id : 21280719739 Question Type : MCQ Option Shuffling : No Is Question Mandatory : No Calculator : None
Response Time : N.A Think Time : N.A Minimum Instruction Time : 0

Correct Marks : 5 Wrong Marks : 1

Question Key Details :

Key	Value
Comprehension	MCQ

*P ನೆರ 220% ಡನ 44 | *P ಡನ 44% ಡನ ?

- (1) 88
- (2) 8.8
- (3) 880
- (4) 0.88

Options :

212807118953 1

212807118954 2

212807118955 3

212807118956 4

Question Number : 254 Question Id : 21280719739 Question Type : MCQ Option Shuffling : No Is Question Mandatory : No Calculator : None
Response Time : N.A Think Time : N.A Minimum Instruction Time : 0

Correct Marks : 5 Wrong Marks : 1

Question Key Details :

Key	Value
Comprehension	MCQ

ಸಂಖ್ಯೆ P ನೆರ 22% ಡನ 44 ಡ. P ನೆರ 44% ಡನ ?

- (1) 88
- (2) 8.8
- (3) 880
- (4) 0.88

Options :

212807118953 1

212807118954 2

212807118955 3

212807118956 4

Question Number : 254 Question Id : 21280719739 Question Type : MCQ Option Shuffling : No Is Question Mandatory : No Calculator : None
Response Time : N.A Think Time : N.A Minimum Instruction Time : 0

Correct Marks : 5 Wrong Marks : 1

Question Key Details :

Key	Value
Comprehension	MCQ

ಸಂಖ್ಯೆ P ಡನ 220 % 44 ಡನುಡುಡು. P ನೆರ 44% ಡನ ?

- (1) 88
- (2) 8.8
- (3) 880
- (4) 0.88

Options :

212807118953 1

212807118954 2

212807118955 3

212807118956 4

Question Number : 254 Question Id : 21280719739 Question Type : MCQ Option Shuffling : No Is Question Mandatory : No Calculator : None
Response Time : N.A Think Time : N.A Minimum Instruction Time : 0

Correct Marks : 5 Wrong Marks : 1

Question Key Details :

Key	Value
Comprehension	MCQ

P या संख्येचे 220% = 44 असल्यास P चे 44% किती ?

- (1) 88
- (2) 8.8
- (3) 880
- (4) 0.88

Options :

212807118953-1
212807118954-1
212807118953-3
212807118956-4

Question Number : 254 Question Id : 21280719739 Question Type : MCQ Option Shuffling : No Is Question Mandatory : No Calculator : None
Response Time : N.A Think Time : N.A Minimum Instruction Time : 0

Correct Marks : 5 Wrong Marks : 1

Question Key Details :

Key	Value
Comprehension	MCQ

P എന്ന സംഖ്യയുടെ 220% ആണ് 44. എങ്കിൽ, P യുടെ 44% എത്ര ?

- (1) 88
- (2) 8.8
- (3) 880
- (4) 0.88

Options :

212807118953-1
212807118954-1
212807118953-3
212807118956-4

Question Number : 254 Question Id : 21280719739 Question Type : MCQ Option Shuffling : No Is Question Mandatory : No Calculator : None
Response Time : N.A Think Time : N.A Minimum Instruction Time : 0

Correct Marks : 5 Wrong Marks : 1

Question Key Details :

Key	Value
Comprehension	MCQ

ഒരുതീവ വൃक्षा P ର 220%, 44 തടവ । ഒരുക P ର 44% ?

- (1) 88
- (2) 8.8
- (3) 880
- (4) 0.88

Options :

212807118953-1
212807118954-1
212807118953-3
212807118956-4

Question Number : 254 Question Id : 21280719739 Question Type : MCQ Option Shuffling : No Is Question Mandatory : No Calculator : None
Response Time : N.A Think Time : N.A Minimum Instruction Time : 0

Correct Marks : 5 Wrong Marks : 1

Question Key Details :

Key	Value
Comprehension	MCQ

ਇਕ ਸੰਖਿਆ P ਦਾ 22% 44 ਹੈ ਤਾ P ਦਾ 44% ਕੀ ਹੈ?

- (1) 88
- (2) 8.8
- (3) 880
- (4) 0.88

Options :

212807118953-1
212807118954-1
212807118955-3
212807118956-4

Question Number : 254 Question Id : 21280729739 Question Type : MCQ Option Shuffling : No Is Question Mandatory : No Calculator : None
Response Time : N.A Think Time : N.A Minimum Instruction Time : 0

Correct Marks : 5 Wrong Marks : 1

Question Key Details :

Key	Value
Comprehension	MCQ

P எண்ணின் 4.220% 44 ஆகும். P இன் 44% என்றால் என்ன?

- (1) 88
- (2) 8.8
- (3) 880
- (4) 0.88

Options :

212807118953-1
212807118954-1
212807118955-3
212807118956-4

Question Number : 254 Question Id : 21280729739 Question Type : MCQ Option Shuffling : No Is Question Mandatory : No Calculator : None
Response Time : N.A Think Time : N.A Minimum Instruction Time : 0

Correct Marks : 5 Wrong Marks : 1

Question Key Details :

Key	Value
Comprehension	MCQ

P యొక్క 220% అనేది 44. అప్పుడు P యొక్క 44% ఎంత ?

- (1) 88
- (2) 8.8
- (3) 880
- (4) 0.88

Options :

212807118953-1
212807118954-1
212807118955-3
212807118956-4

Question Number : 254 Question Id : 21280729739 Question Type : MCQ Option Shuffling : No Is Question Mandatory : No Calculator : None
Response Time : N.A Think Time : N.A Minimum Instruction Time : 0

Correct Marks : 5 Wrong Marks : 1

Question Key Details :

Key	Value
Comprehension	MCQ

ایک نمبر p کا 220% فیصد 44 ہے، تو p کا 44% فیصد کتنا ہوگا ؟

88 (1)

8.8 (2)

880 (3)

0.88 (4)

Options :

212807118953 1

212807118954 2

212807118955 3

212807118956 4

Question Number : 255 Question Id : 21280719740 Question Type : MCQ Option Shuffling : No Is Question Mandatory : No Calculator : None
Response Time : N.A Think Time : N.A Minimum Instruction Time : 0

Correct Marks : 5 Wrong Marks : 1

Question Key Details :

Key	Value
Comprehension	MCQ

In how much time will a sum of ₹ 64,000 amount to ₹ 68,921 at 5% per annum, interest being compounded half yearly ?

(1) 2 years

(2) 3 years

(3) $1\frac{1}{2}$ years

(4) $2\frac{1}{2}$ years

Options :

212807118957 1

212807118958 2

212807118959 3

212807118960 4

Question Number : 255 Question Id : 21280719740 Question Type : MCQ Option Shuffling : No Is Question Mandatory : No Calculator : None
Response Time : N.A Think Time : N.A Minimum Instruction Time : 0

Correct Marks : 5 Wrong Marks : 1

Question Key Details :

Key	Value
Comprehension	MCQ

5% वार्षिक व्याज दर से ₹ 64,000 की राशि कितने वर्ष में ₹ 68,921 हो जाएगी, जबकि व्याज अर्द्धवार्षिक संयोजित हो रहा है ?

- (1) 2 वर्ष
- (2) 3 वर्ष
- (3) $1\frac{1}{2}$ वर्ष
- (4) $2\frac{1}{2}$ वर्ष

Options :

212807118957 1

212807118958 1

212807118959 1

212807118960 4

Question Number : 255 Question Id : 21280729740 Question Type : MCQ Option Shuffling : No Is Question Mandatory : No Calculator : None

Response Time : N.A Think Time : N.A Minimum Instruction Time : 0

Correct Marks : 5 Wrong Marks : 1

Question Key Details :

Key	Value
Comprehension	MCQ

5% वार्षिक सूतत, सूत ढेर वार्षिक वृद्धि करि 64000 टका किमान वरुवत 68921 टका ह'व ह

- (1) 2 वरुवत
- (2) 3 वरुवत
- (3) $1\frac{1}{2}$ वरुवत
- (4) $2\frac{1}{2}$ वरुवत

Options :

212807118957 1

212807118958 1

212807118959 3

212807118960 4

Question Number : 255 Question Id : 21280729740 Question Type : MCQ Option Shuffling : No Is Question Mandatory : No Calculator : None

Response Time : N.A Think Time : N.A Minimum Instruction Time : 0

Correct Marks : 5 Wrong Marks : 1

Question Key Details :

Key	Value
Comprehension	MCQ

কত সময়ে 64,000 টাকা 68,921 টাকা হবে বার্ষিক 5% সুদের হারে, চক্রবৃদ্ধি সুদ মাধ্যমিক মেওয়া হয় ?

- (1) 2 বছর
- (2) 3 বছর
- (3) $1\frac{1}{2}$ বছর
- (4) $2\frac{1}{2}$ বছর

Options :

212807118957 1

212807118958 1

212807118959 3

212807118960 4

Question Number : 255 Question Id : 21280729740 Question Type : MCQ Option Shuffling : No Is Question Mandatory : No Calculator : None
Response Time : N.A Think Time : N.A Minimum Instruction Time : 0

Correct Marks : 5 Wrong Marks : 1

Question Key Details :

Key	Value
Comprehension	MCQ

কেতলা সমযমাং ₹ 64000 নী রকম বার্ষিক 5% না ধরে ₹ 68921 ধরে, ব্যাংক স্বর্ধবার্ষিক সক্রবৃদ্ধি করবারা আযশে.

- (1) 2 বর্ধ
- (2) 3 বর্ধ
- (3) $1\frac{1}{2}$ বর্ধ
- (4) $2\frac{1}{2}$ বর্ধ

Options :

212807118957 1

212807118958 1

212807118959 3

212807118960 4

Question Number : 255 Question Id : 21280729740 Question Type : MCQ Option Shuffling : No Is Question Mandatory : No Calculator : None
Response Time : N.A Think Time : N.A Minimum Instruction Time : 0

Correct Marks : 5 Wrong Marks : 1

Question Key Details :

Key	Value
Comprehension	MCQ

ಬಡ್ಡಿಯು ಆರ್ಥ ಪರ್ಷಕ್ಕೆ ದ್ವಿಗುಣಗೊಳ್ಳುತ್ತಿದ್ದರೆ, 5% ಪ್ರತಿ ವಾರ್ಷಿಕ ಬಡ್ಡಿಯ ಪರದಲ್ಲಿ ಒಟ್ಟು ಮೊತ್ತ ₹ 64,000 ವು ₹ 68,921 ಆಗಲು ಎಷ್ಟು ಸಮಯ ಬೇಕು ?

- (1) 2 ವರ್ಷಗಳು
- (2) 3 ವರ್ಷಗಳು
- (3) $1\frac{1}{2}$ ವರ್ಷಗಳು
- (4) $2\frac{1}{2}$ ವರ್ಷಗಳು

Options :

212807118957 1

212807118958 1

212807118959 3

212807118960 4

Question Number : 255 Question Id : 21280719740 Question Type : MCQ Option Shuffling : No Is Question Mandatory : No Calculator : None
Response Time : N.A Think Time : N.A Minimum Instruction Time : 0

Correct Marks : 5 Wrong Marks : 1

Question Key Details :

Key	Value
Comprehension	MCQ

व्याजाची चक्रवाह दर सहा महिन्यांनी होत असल्यास व व्याजदर 5 द.सा.द.से. असल्यास ₹ 64000 इतकी रक्कम ₹ 68921 होण्यास किती कालावधी लागेल ?

- (1) 2 वर्षे
- (2) 3 वर्षे
- (3) $1\frac{1}{2}$ वर्षे
- (4) $2\frac{1}{2}$ वर्षे

Options :

212807118957 1

212807118958 1

212807118959 3

212807118960 4

Question Number : 255 Question Id : 21280719740 Question Type : MCQ Option Shuffling : No Is Question Mandatory : No Calculator : None
Response Time : N.A Think Time : N.A Minimum Instruction Time : 0

Correct Marks : 5 Wrong Marks : 1

Question Key Details :

Key	Value
Comprehension	MCQ

അർദ്ധ വാർഷിക പലിശ നൽകുന്ന ഒരു സംവിധാനത്തിൽ, 64000 രൂപ 5% വാർഷിക പലിശ നിരക്കിൽ 68921 രൂപയായി മാറാൻ എത്ര കാലമെടുക്കും ?

- (1) 2 വർഷം
- (2) 3 വർഷം
- (3) $1\frac{1}{2}$ വർഷം
- (4) $2\frac{1}{2}$ വർഷം

Options :

- 112807118957 1
- 112807118958 2
- 112807118959 3
- 112807118960 4

Question Number : 255 Question Id : 21280729740 Question Type : MCQ Option Shuffling : No Is Question Mandatory : No Calculator : None
 Response Time : N.A Think Time : N.A Minimum Instruction Time : 0
 Correct Marks : 5 Wrong Marks : 1

Question Key Details :

Key	Value
Comprehension	MCQ

ഒരു അർദ്ധവർഷം വെച്ച് 5% വാർഷിക പലിശ നൽകുന്ന ഒരു സംവിധാനത്തിൽ, 64000 രൂപ 68921 രൂപയായി മാറാൻ എത്ര കാലമെടുക്കും ?

- (1) 2 വർഷം
- (2) 3 വർഷം
- (3) $1\frac{1}{2}$ വർഷം
- (4) $2\frac{1}{2}$ വർഷം

Options :

- 112807118957 1
- 112807118958 2
- 112807118959 3
- 112807118960 4

Question Number : 255 Question Id : 21280729740 Question Type : MCQ Option Shuffling : No Is Question Mandatory : No Calculator : None
 Response Time : N.A Think Time : N.A Minimum Instruction Time : 0
 Correct Marks : 5 Wrong Marks : 1

Question Key Details :

Key	Value
Comprehension	MCQ

ਕਿੰਨ ਸਮੇਂ ਵਿਚ 64000 ਰੁਪਏ ਦੀ ਰਕਮ 68921 ਰੁਪਏ 5% ਸਲਾਨਾ ਵਿਆਜ ਤੇ ਛਿਮਾਹੀ ਮਿਸ਼ਰਿਤ ਕੀਤੀ ਜਾ ਸਕਦੀ ਹੈ?

- (1) 2 ਸਾਲ
- (2) 3 ਸਾਲ
- (3) $1\frac{1}{2}$ ਸਾਲ
- (4) $2\frac{1}{2}$ ਸਾਲ

Options :

112807118957 1

112807118958 2

112807118959 3

112807118960 4

Question Number : 255 Question Id : 21280729740 Question Type : MCQ Option Shuffling : No Is Question Mandatory : No Calculator : None
Response Time : N.A Think Time : N.A Minimum Instruction Time : 0

Correct Marks : 5 Wrong Marks : 1

Question Key Details :

Key	Value
Comprehension	MCQ

₹ 64,000 என்ற தொகை ஆண்டுக்கு 5% வட்டி விகிதத்தில் ₹ 68921-க்கு எவ்வளவு காலத்தில் சிடைக்கும்?

- (1) 2 ஆண்டுகள்
- (2) 3 ஆண்டுகள்
- (3) $1\frac{1}{2}$ ஆண்டுகள்
- (4) $2\frac{1}{2}$ ஆண்டுகள்

Options :

112807118957 1

112807118958 2

112807118959 3

112807118960 4

Question Number : 255 Question Id : 21280729740 Question Type : MCQ Option Shuffling : No Is Question Mandatory : No Calculator : None
Response Time : N.A Think Time : N.A Minimum Instruction Time : 0

Correct Marks : 5 Wrong Marks : 1

Question Key Details :

Key	Value
Comprehension	MCQ

వడ్డీ ఇచ్చే సంవత్సరానికి ఒక మారు లెక్కించగా, సంవత్సరానికి 5% వడ్డీతో ₹ 64000 మొత్తంతో ₹ 68921 కాపడానికి ఎంత కాలం పడుతుంది ?

- (1) 2 సంవత్సరాలు
 (2) 3 సంవత్సరాలు
 (3) $1\frac{1}{2}$ సంవత్సరాలు
 (4) $2\frac{1}{2}$ సంవత్సరాలు

Options :

- 212807118957 1
 212807118958 2
 212807118959 3
 212807118960 4

Question Number : 255 Question Id : 21280719740 Question Type : MCQ Option Shuffling : No Is Question Mandatory : No Calculator : None
 Response Time : N.A Think Time : N.A Minimum Instruction Time : 0
 Correct Marks : 5 Wrong Marks : 1

Question Key Details :

Key	Value
Comprehension	MCQ

شش ماہی کمپاؤنڈنگ سود کے حساب سے کتنے دنوں میں 64000 روپے رقم کا کل 68921 روپے رقم سا ادا 5% فیصد پر ہو جائیگا ؟

- (1) 2 سال
 (2) 3 سال
 (3) $1\frac{1}{2}$ سال
 (4) $2\frac{1}{2}$ سال

Options :

- 212807118957 1
 212807118958 2
 212807118959 3
 212807118960 4

Question Number : 256 Question Id : 21280719741 Question Type : MCQ Option Shuffling : No Is Question Mandatory : No Calculator : None
 Response Time : N.A Think Time : N.A Minimum Instruction Time : 0
 Correct Marks : 5 Wrong Marks : 1

Question Key Details :

Key	Value
Comprehension	MCQ

The difference between simple interest and compound interest on a certain sum of money for 3 years at 10% per annum is ₹ 62. The sum is :

- (1) ₹ 500
 (2) ₹ 800
 (3) ₹ 1,000
 (4) ₹ 2,000

Options :

- 212807118961 1
- 212807118962 2
- 212807118963 3
- 212807118964 4

Question Number : 256 Question Id : 21280729741 Question Type : MCQ Option Shuffling : No Is Question Mandatory : No Calculator : None
Response Time : N.A Think Time : N.A Minimum Instruction Time : 0

Correct Marks : 5 Wrong Marks : 1

Question Key Details :

Key	Value
Comprehension	MCQ

10 % वार्षिक व्याज दर से किसी राशि पर 3 वर्ष के साधारण व्याज और चक्रवृद्धि व्याज का अंतर ₹ 62 है। यह राशि कितनी है?

- (1) ₹ 500
- (2) ₹ 800
- (3) ₹ 1,000
- (4) ₹ 2,000

Options :

- 212807118961 1
- 212807118962 2
- 212807118963 3
- 212807118964 4

Question Number : 256 Question Id : 21280729741 Question Type : MCQ Option Shuffling : No Is Question Mandatory : No Calculator : None
Response Time : N.A Think Time : N.A Minimum Instruction Time : 0

Correct Marks : 5 Wrong Marks : 1

Question Key Details :

Key	Value
Comprehension	MCQ

এটা মুঠ টকাৰ 10% বছৰি সুতত 3 বছৰৰ বাবে সৰল সুত আৰু চক্রবৃদ্ধি সুতৰ মাজৰ পাৰ্থক্যটো হৈছে 62 টকা। মুঠ টকাটো হৈছে।

- (1) ₹ 500
- (2) ₹ 800
- (3) ₹ 1000
- (4) ₹ 2000

Options :

- 212807118961 1
- 212807118962 2
- 212807118963 3
- 212807118964 4

Question Number : 256 Question Id : 21280729741 Question Type : MCQ Option Shuffling : No Is Question Mandatory : No Calculator : None
Response Time : N.A Think Time : N.A Minimum Instruction Time : 0

Correct Marks : 5 Wrong Marks : 1

Question Key Details :

Key	Value
Comprehension	MCQ

वार्षिक 10% सुनेर हारे 3 बहरेर कोनो निदिष्ट परिमाण आसलेर सरल सुन ओ चक्रबुद्धि सुनेर पार्थका 62 टाका। आहले

असल हल—

- (1) ₹ 500
- (2) ₹ 800
- (3) ₹ 1000
- (4) ₹ 2000

Options :

212807118961 1

212807118962 2

212807118963 3

212807118964 4

Question Number : 256 Question Id : 21280719741 Question Type : MCQ Option Shuffling : No Is Question Mandatory : No Calculator : None
Response Time : N.A Think Time : N.A Minimum Instruction Time : 0

Correct Marks : 5 Wrong Marks : 1

Question Key Details :

Key	Value
Comprehension	MCQ

सादा व्याज अने सकृदुद्धि व्याज वस्थेनो लडावत 3 वर्षधी 10% प्रति वर्ष भाटे ओकसत रकम पर ₹ 62 छे. सरवाणो शोधो.

- (1) ₹ 500
- (2) ₹ 800
- (3) ₹ 1000
- (4) ₹ 2000

Options :

212807118961 1

212807118962 2

212807118963 3

212807118964 4

Question Number : 256 Question Id : 21280719741 Question Type : MCQ Option Shuffling : No Is Question Mandatory : No Calculator : None
Response Time : N.A Think Time : N.A Minimum Instruction Time : 0

Correct Marks : 5 Wrong Marks : 1

Question Key Details :

Key	Value
Comprehension	MCQ

शरफ बढ्दि मक्कु जक्कु बढ्दियु सडुमिस वृत्तारुपु दुन्दु निगदित मेलुदुद हारकु 3 वर्षदरु 10% प्रुति वारुशुफरु धरुदरु रु 62. बडुडु मेलुदुदु :

- (1) ₹ 500
- (2) ₹ 800
- (3) ₹ 1,000
- (4) ₹ 2,000

Options :

212807118961 1

212807118962 2

212807118963 3

212807118964 4

Question Number : 256 Question Id : 21280719741 Question Type : MCQ Option Shuffling : No Is Question Mandatory : No Calculator : None
Response Time : N.A Think Time : N.A Minimum Instruction Time : 0

Correct Marks : 5 Wrong Marks : 1

Question Key Details :

Key	Value
-----	-------

Question Number : 256 Question Id : 21280719741 Question Type : MCQ Option Shuffling : No Is Question Mandatory : No Calculator : None
Response Time : N.A Think Time : N.A Minimum Instruction Time : 0

Correct Marks : 5 Wrong Marks : 1

Question Key Details :

Key	Value
Comprehension	MCQ

ਸਾਧਾਰਣ ਵਿਆਜ ਤੇ ਮਿਸ਼ਰਿਤ ਵਿਆਜ ਵਿਚ ਅੰਤਰ ਤਿੰਨ ਸਾਲਾਂ ਤੋਂ 10% ਪ੍ਰਤੀ ਸਾਲ ਲਈ ਇਕ ਨਿਸ਼ਚਿਤ ਰਕਮ ਤੇ 62 ਰੁਪਏ ਹੈ - ਇਹ ਰਕਮ ਹੈ -

- (1) 500 ਰੁਪਏ
- (2) 800 ਰੁਪਏ
- (3) 1000 ਰੁਪਏ
- (4) 2000 ਰੁਪਏ

Options :

212807118961 1
212807118962 1
212807118963 3
212807118964 4

Question Number : 256 Question Id : 21280719741 Question Type : MCQ Option Shuffling : No Is Question Mandatory : No Calculator : None
Response Time : N.A Think Time : N.A Minimum Instruction Time : 0

Correct Marks : 5 Wrong Marks : 1

Question Key Details :

Key	Value
Comprehension	MCQ

வருடத்திற்கு 10% என்ற விகிதத்தில் 3 ஆண்டுகளுக்கு ஒரு குறிப்பிட்ட தொகையின் மீதான எளிய வட்டி மற்றும் கூட்டு வட்டிக்கு இடையிலான வித்தியாசம் ₹ 62 ஆகும். மொத்த தொகை:

- (1) ₹ 500
- (2) ₹ 800
- (3) ₹ 1000
- (4) ₹ 2000

Options :

212807118961 1
212807118962 1
212807118963 3
212807118964 4

Question Number : 256 Question Id : 21280719741 Question Type : MCQ Option Shuffling : No Is Question Mandatory : No Calculator : None
Response Time : N.A Think Time : N.A Minimum Instruction Time : 0

Correct Marks : 5 Wrong Marks : 1

Question Key Details :

Key	Value
Comprehension	MCQ

సంవత్సరానికి 10% వడ్డీతో 3 సంవత్సరాల ఒక మొత్తం పై చక్రవర్తి మరియు వారు వడ్డీల మధ్య వ్యత్యాసం ₹ 62 కు మొత్తం ఎంత ?

- (1) ₹ 500
 (2) ₹ 800
 (3) ₹ 1000
 (4) ₹ 2000

Options :

212807118961 3
 212807118962 3
 212807118963 3
 212807118964 4

Question Number : 256 Question Id : 21280729741 Question Type : MCQ Option Shuffling : No Is Question Mandatory : No Calculator : None
 Response Time : N.A Think Time : N.A Minimum Instruction Time : 0

Correct Marks : 5 Wrong Marks : 1

Question Key Details :

Key	Value
Comprehension	MCQ

عام پچھل سود اور کمپاؤنڈ سود کے درمیان فرق سا ان 10% ائصد کے حساب سے تین سال کے لیے ایک یقینی مجموعی رقم پر 62 روپے ہے، تو کل رقم ہوگی _____

- 500 روپے (1)
 800 روپے (2)
 1000 روپے (3)
 2000 روپے (4)

Options :

212807118961 3
 212807118962 3
 212807118963 3
 212807118964 4

Question Number : 257 Question Id : 21280729742 Question Type : MCQ Option Shuffling : No Is Question Mandatory : No Calculator : None
 Response Time : N.A Think Time : N.A Minimum Instruction Time : 0

Correct Marks : 5 Wrong Marks : 1

Question Key Details :

Key	Value
Comprehension	MCQ

A rectangular park is 45 m long and 30 m wide. A 2.5 m wide path is constructed all along outside the park. The area of the path is :

- (1) 1750 m²
 (2) 1250 m²
 (3) 400 m²
 (4) 500 m²

Options :

212807118965 3
 212807118966 3
 212807118967 3
 212807118968 4

Question Number : 257 Question Id : 21280718961 Question Type : MCQ Option Shuffling : No Is Question Mandatory : No Calculator : None
Response Time : N.A Think Time : N.A Minimum Instruction Time : 0

Correct Marks : 5 Wrong Marks : 1

Question Key Details :

Key	Value
Comprehension	MCQ

एक आयताकार पार्क की लंबाई 45 मीटर है और चौड़ाई 30 मीटर है। इस पार्क के बाहर चारों ओर 2.5 मीटर चौड़े मार्ग का निर्माण किया गया है। इस मार्ग का क्षेत्रफल क्या है ?

- (1) 1750 मीटर²
(2) 1250 मीटर²
(3) 400 मीटर²
(4) 500 मीटर²

Options :

21280718961 1

21280718962 2

21280718963 3

21280718964 4

Question Number : 257 Question Id : 21280718962 Question Type : MCQ Option Shuffling : No Is Question Mandatory : No Calculator : None
Response Time : N.A Think Time : N.A Minimum Instruction Time : 0

Correct Marks : 5 Wrong Marks : 1

Question Key Details :

Key	Value
Comprehension	MCQ

45 m দীঘল আৰু 30 m বহল এখন আয়তাকার উদ্যান আছে। গোটেই উদ্যানখনৰ বাহিৰে বাহিৰে এটা 2.5 m বহল পদপথ এটা বানোৱা হৈছে। এতিয়া উদ্যানখনৰ কালি হ'ব :

- (1) 1750 m²
(2) 1250 m²
(3) 400 m²
(4) 500 m²

Options :

21280718961 1

21280718962 2

21280718963 3

21280718964 4

Question Number : 257 Question Id : 21280718963 Question Type : MCQ Option Shuffling : No Is Question Mandatory : No Calculator : None
Response Time : N.A Think Time : N.A Minimum Instruction Time : 0

Correct Marks : 5 Wrong Marks : 1

Question Key Details :

Key	Value
Comprehension	MCQ

একটি আয়তাকার উদ্যান 45 মিটার লম্বা এবং 30 মিটার চওড়া। উদ্যানের বাইরের দিকে 2.5 মিটারের একটি চওড়া রাস্তা তৈরি করা হয়। রাস্তার ক্ষেত্রফল হল —

- (1) 1750 বর্গমিটার
- (2) 1250 বর্গমিটার
- (3) 400 বর্গমিটার
- (4) 500 বর্গমিটার

Options :

- 212807118963 1
212807118966 2
212807118967 3
212807118965 4

Question Number : 25* Question Id : 21280719742 Question Type : MCQ Option Shuffling : No Is Question Mandatory : No Calculator : None
Response Time : N.A Think Time : N.A Minimum Instruction Time : 0

Correct Marks : 5 Wrong Marks : 1

Question Key Details :

Key	Value
Comprehension	MCQ

এক রম্বসের দৈর্ঘ্য 45 m এবং 30 m পড়ানো আছে। দৈর্ঘ্যের অর্ধেক 25 m পড়ানো রস্তু পাঁচবার আলাদা করে, তাই রস্তুটির ক্ষেত্রফল কত?

- (1) 1750 m²
- (2) 1250 m²
- (3) 400 m²
- (4) 500 m²

Options :

- 212807118963 1
212807118966 2
212807118967 3
212807118965 4

Question Number : 25* Question Id : 21280719742 Question Type : MCQ Option Shuffling : No Is Question Mandatory : No Calculator : None
Response Time : N.A Think Time : N.A Minimum Instruction Time : 0

Correct Marks : 5 Wrong Marks : 1

Question Key Details :

Key	Value
Comprehension	MCQ

একটি আয়তাকার উদ্যান 45 m লম্বা এবং 30 m চওড়া। উদ্যানের বাইরের দিকে 2.5 m চওড়া রাস্তা তৈরি করা হয়। রাস্তার ক্ষেত্রফল হল —

- (1) 1750 m²
- (2) 1250 m²
- (3) 400 m²
- (4) 500 m²

Options :

- 212807118963 1
212807118966 2
212807118967 3
212807118965 4

Question Number : 25* Question Id : 21280719742 Question Type : MCQ Option Shuffling : No Is Question Mandatory : No Calculator : None
Response Time : N.A Think Time : N.A Minimum Instruction Time : 0

Correct Marks : 5 Wrong Marks : 1

Question Key Details :

Key	Value
Comprehension	MCQ

एक आयताकृती उद्यान 45 मी. लांब आणि 30 मी. रुंद आहे, या उद्यानाच्या सर्व बाजूंस 2.5 मी. रुंदीचा रस्ता बांधण्यात आला. त्या रस्त्याचे क्षेत्रफळ किती असेल ?

- (1) 1750 m^2
- (2) 1250 m^2
- (3) 400 m^2
- (4) 500 m^2

Options :

212807118965-1

212807118965-2

212807118965-3

212807118965-4

Question Number : 257 Question Id : 21280729742 Question Type : MCQ Option Shuffling : No Is Question Mandatory : No Calculator : None Response Time : N.A Think Time : N.A Minimum Instruction Time : 0

Correct Marks : 5 Wrong Marks : 1

Question Key Details :

Key	Value
Comprehension	MCQ

ചത്തൂർ അക്ഷയിയിലുള്ള ഒരു പാർക്കിന് 45 മീറ്റർ നീളവും 30 മീറ്റർ വീതിയുമുണ്ട്. പാർക്കിന് പുറത്തു പാർക്കിന് ചുറ്റിലുമായി 2.5 മീറ്റർ വീതിയിൽ വഴി നിർമ്മിക്കുന്നു. വഴിയുടെ വിസ്തീർണ്ണം എത്ര ?

- (1) 1750 m^2
- (2) 1250 m^2
- (3) 400 m^2
- (4) 500 m^2

Options :

212807118965-1

212807118965-2

212807118965-3

212807118965-4

Question Number : 257 Question Id : 21280729742 Question Type : MCQ Option Shuffling : No Is Question Mandatory : No Calculator : None Response Time : N.A Think Time : N.A Minimum Instruction Time : 0

Correct Marks : 5 Wrong Marks : 1

Question Key Details :

Key	Value
Comprehension	MCQ

ରୋଡିଏ ଆଇଡାବାଇ ଉଦ୍ୟାନର ଲମ୍ବ 45 ମିଟର ଏବଂ ରୂଢ଼ା 30 ମିଟର । ପାର୍ (ଉଦ୍ୟାନ)ର ବାହ୍ୟ ରୂଢ଼ାପାଶ୍ଚାତ୍ 2.5 ମିଟର ରୂଢ଼ା ରାସ୍ତା (ପଥ) ତିଆରି କରାଗଲା । ତେବେ ରାସ୍ତା (ପଥ)ର କ୍ଷେତ୍ରଫଳ କେତେ ହେବ ?

- (1) 1750 m^2
- (2) 1250 m^2
- (3) 400 m^2
- (4) 500 m^2

Options :

212807118965-1

212807118965-2

212807118965-3

212807118968-4

Question Number : 257 Question Id : 21280719742 Question Type : MCQ Option Shuffling : No Is Question Mandatory : No Calculator : None
Response Time : N.A Think Time : N.A Minimum Instruction Time : 0

Correct Marks : 5 Wrong Marks : 1

Question Key Details :

Key	Value
Comprehension	MCQ

ਇਕ ਆਇਤਾਕਾਰ ਖਾਰਕ 45 ਮੀਟਰ ਲੰਬਾ ਹੈ 30 ਮੀਟਰ ਚੌੜਾ ਹੈ, ਖਾਰਕ ਦੇ ਬਾਹਰ 2.5 ਮੀਟਰ ਚੌੜਾ ਰਸਤਾ ਇਕੱਲੇ ਹੀ ਬਣਾਇਆ ਗਿਆ ਹੈ, ਉਸ ਰਸਤੇ ਦਾ ਵਰਗਮੀਟਰ ਹੈ -

- (1) 1750 ਮੀਟਰ²
- (2) 1250 ਮੀਟਰ²
- (3) 400 ਮੀਟਰ²
- (4) 500 ਮੀਟਰ²

Options :

212807118968-1

212807118968-2

212807118968-3

212807118968-4

Question Number : 257 Question Id : 21280719742 Question Type : MCQ Option Shuffling : No Is Question Mandatory : No Calculator : None
Response Time : N.A Think Time : N.A Minimum Instruction Time : 0

Correct Marks : 5 Wrong Marks : 1

Question Key Details :

Key	Value
Comprehension	MCQ

ਸੇਵਾਕਾਵਾਂ ਪੁਸ਼ਪਾਂ 45 ਮੀਟਰ ਚੌੜਾ 30 ਮੀਟਰ ਅਕਲਮਾਂ ਕੋਲੋਂ ਪੁਸ਼ਪਾਂ .
ਪੁਸ਼ਪਾਂ ਵੱਲੋਂ 2.5 ਮੀਟਰ ਅਕਲਮਾਂ ਵਿੱਚ ਪਾਠੇ ਅਮੋਕਕਪਪਦੁੰਗੁੰਗੁ .
ਪਾਠੇ ਵਿੱਚ ਪਰਪਪਪਪ :

- (1) 1750 ਮੀ²
- (2) 1250 ਮੀ²
- (3) 400 ਮੀ²
- (4) 500 ਮੀ²

Options :

212807118968-1

212807118968-2

212807118968-3

212807118968-4

Question Number : 257 Question Id : 21280719742 Question Type : MCQ Option Shuffling : No Is Question Mandatory : No Calculator : None
Response Time : N.A Think Time : N.A Minimum Instruction Time : 0

Correct Marks : 5 Wrong Marks : 1

Question Key Details :

Key	Value
Comprehension	MCQ

45 m పొడవు మరియు 30 m వెడల్పు గల దీర్ఘచతురస్ర పొద్దు చుట్టు వెలుపలి వైపు 2.5 m వెడల్పుతో దారిని నిర్మించారు. ఆ దారి వైశాల్యం ?

- (1) 1750 m^2
- (2) 1250 m^2
- (3) 400 m^2
- (4) 500 m^2

Options :

- 212807118965 1
212807118966 1
212807118967 3
212807118968 4

Question Number : 257 Question Id : 21280729742 Question Type : MCQ Option Shuffling : No Is Question Mandatory : No Calculator : None
Response Time : N.A Think Time : N.A Minimum Instruction Time : 0

Correct Marks : 5 Wrong Marks : 1

Question Key Details :

Key	Value
Comprehension	MCQ

ایک مستطیل نما پارک 45 میٹر لمبا اور 30 میٹر چوڑا ہے اور ایک 2.5 میٹر چوڑا راستہ پارک کے باہر سے لگا ہوا بنایا گیا ہے۔ تو راستے کا رقبہ _____ ہوگا ؟

- (1) 1750 m^2
- (2) 1250 m^2
- (3) 400 m^2
- (4) 500 m^2

Options :

- 212807118965 1
212807118966 1
212807118967 3
212807118968 4

Question Number : 258 Question Id : 21280729743 Question Type : MCQ Option Shuffling : No Is Question Mandatory : No Calculator : None
Response Time : N.A Think Time : N.A Minimum Instruction Time : 0

Correct Marks : 5 Wrong Marks : 1

Question Key Details :

Key	Value
Comprehension	MCQ

The area of a triangle is $9y \text{ cm}^2$. Find the value of y if its area is equal to the area of an equilateral triangle having side 6 cm.

- (1) 2
- (2) $\sqrt{2}$
- (3) 3
- (4) $\sqrt{3}$

Options :

- 212807118969 1
212807118970 1

212507113971:3
212507113972:4

Question Number : 258 Question Id : 21250729743 Question Type : MCQ Option Shuffling : No Is Question Mandatory : No Calculator : None
Response Time : N.A Think Time : N.A Minimum Instruction Time : 0

Correct Marks : 5 Wrong Marks : 1

Question Key Details :

Key	Value
Comprehension	MCQ

एक त्रिभुज का क्षेत्रफल $9y$ सेमी² है। तो y का मान ज्ञात कीजिए, यदि इसका क्षेत्रफल एक ऐसे समबाहु त्रिभुज के क्षेत्रफल के समान है, जिसकी भुजा 6 सेमी है।

- (1) 2
(2) $\sqrt{2}$
(3) 3
(4) $\sqrt{3}$

Options :

212507113969:1
212507113970:2
212507113971:3
212507113972:4

Question Number : 258 Question Id : 21250729743 Question Type : MCQ Option Shuffling : No Is Question Mandatory : No Calculator : None
Response Time : N.A Think Time : N.A Minimum Instruction Time : 0

Correct Marks : 5 Wrong Marks : 1

Question Key Details :

Key	Value
Comprehension	MCQ

एक त्रिभुज की कालि है $9y$ cm²। यदि त्रिभुज की कालि 6 cm बाहू है। एक समबाहु त्रिभुज के साथ एक त्रिभुज y का मान कि है ?

- (1) 2
(2) $\sqrt{2}$
(3) 3
(4) $\sqrt{3}$

Options :

212507113969:1
212507113970:2
212507113971:3
212507113972:4

Question Number : 258 Question Id : 21250729743 Question Type : MCQ Option Shuffling : No Is Question Mandatory : No Calculator : None
Response Time : N.A Think Time : N.A Minimum Instruction Time : 0

Correct Marks : 5 Wrong Marks : 1

Question Key Details :

Key	Value
Comprehension	MCQ

একটি ত্রিকোণের ক্ষেত্রফল $9y \text{ cm}^2$ । যদি এর ক্ষেত্রফল একটি 6 cm বাহু বিশিষ্ট একটি সমবাহু ত্রিকোণের ক্ষেত্রফলের সমান হয়, তাহলে y -এর মান হবে —

- (1) 2
(2) $\sqrt{2}$
(3) 3
(4) $\sqrt{3}$

Options :

- 212807118969 1
212807118970 2
212807118971 3
212807118972 4

Question Number : 258 Question Id : 21280719743 Question Type : MCQ Option Shuffling : No Is Question Mandatory : No Calculator : None
Response Time : N.A Think Time : N.A Minimum Instruction Time : 0
Correct Marks : 5 Wrong Marks : 1

Question Key Details :

Key	Value
Comprehension	MCQ

ত্রিকোণটির বিস্তার $9y \text{ cm}^2$ । y -এর মান খুঁজে বের করতে একটি সমবাহু ত্রিকোণের ক্ষেত্রফল $9y \text{ cm}^2$ । যদি এর ক্ষেত্রফল একটি 6 cm বাহু বিশিষ্ট একটি সমবাহু ত্রিকোণের ক্ষেত্রফলের সমান হয়, তাহলে y -এর মান হবে —

- (1) 2
(2) $\sqrt{2}$
(3) 3
(4) $\sqrt{3}$

Options :

- 212807118969 1
212807118970 2
212807118971 3
212807118972 4

Question Number : 258 Question Id : 21280719743 Question Type : MCQ Option Shuffling : No Is Question Mandatory : No Calculator : None
Response Time : N.A Think Time : N.A Minimum Instruction Time : 0
Correct Marks : 5 Wrong Marks : 1

Question Key Details :

Key	Value
Comprehension	MCQ

একটি ত্রিকোণের ক্ষেত্রফল $9y \text{ cm}^2$ । যদি এর ক্ষেত্রফল একটি 6 cm বাহু বিশিষ্ট একটি সমবাহু ত্রিকোণের ক্ষেত্রফলের সমান হয়, তাহলে y -এর মান হবে —

- (1) 2
(2) $\sqrt{2}$
(3) 3
(4) $\sqrt{3}$

Options :

- 212807118969 1
212807118970 2
212807118971 3
212807118972 4

Question Number : 258 Question Id : 212607189743 Question Type : MCQ Option Shuffling : No Is Question Mandatory : No Calculator : None
Response Time : N.A Think Time : N.A Minimum Instruction Time : 0

Correct Marks : 5 Wrong Marks : 1

Question Key Details :

Key	Value
Comprehension	MCQ

एका त्रिकोणाचे क्षेत्रफळ $9y \text{ cm}^2$ इतके आहे. जर 6 से.मी. बाजू असलेल्या एका समभुज त्रिकोणाच्या क्षेत्रफळाइतकेच याचे क्षेत्रफळ असेल तर y चे मूल्य शोधा.

- (1) 2
(2) $\sqrt{2}$
(3) 3
(4) $\sqrt{3}$

Options :

21260718969 1

21260718970 2

21260718971 3

21260718972 4

Question Number : 258 Question Id : 212607189743 Question Type : MCQ Option Shuffling : No Is Question Mandatory : No Calculator : None
Response Time : N.A Think Time : N.A Minimum Instruction Time : 0

Correct Marks : 5 Wrong Marks : 1

Question Key Details :

Key	Value
Comprehension	MCQ

ഒരു त्रिकोणासाठीचे विस्तीർण $9y \text{ cm}^2$ आहे. 6 cm बाजू असलेल्या एका समभुज त्रिकोणाच्या क्षेत्रफळाइतकेच याचे क्षेत्रफळ असेल तर y चे मूल्य शोधा.

- (1) 2
(2) $\sqrt{2}$
(3) 3
(4) $\sqrt{3}$

Options :

21260718969 1

21260718970 2

21260718971 3

21260718972 4

Question Number : 258 Question Id : 212607189743 Question Type : MCQ Option Shuffling : No Is Question Mandatory : No Calculator : None
Response Time : N.A Think Time : N.A Minimum Instruction Time : 0

Correct Marks : 5 Wrong Marks : 1

Question Key Details :

Key	Value
Comprehension	MCQ

ਜੇਕਰ y ਚੁੰਬਕੀ ਖੇਤਰ $9y \text{ cm}^2$ ਹੈ ਅਤੇ y ਦਾ ਮੁੱਲ 6 cm ਹੈ, ਤਾਂ y ਚੁੰਬਕੀ ਖੇਤਰ 6 cm ਵਾਲੀ ਖੇਤਰ ਦੇ ਚੁੰਬਕੀ ਖੇਤਰ ਦੇ ਬਰਾਬਰ ਹੈ।

- (1) 2
- (2) $\sqrt{2}$
- (3) 3
- (4) $\sqrt{3}$

Options :
 212807118969 1
 212807118970 2
 212807118971 3
 212807118972 4

Question Number : 258 Question Id : 21280719743 Question Type : MCQ Option Shuffling : No Is Question Mandatory : No Calculator : None
 Response Time : N.A Think Time : N.A Minimum Instruction Time : 0
 Correct Marks : 5 Wrong Marks : 1

Question Key Details :

Key	Value
Comprehension	MCQ

ਇਕ ਤਿਕੋਣ ਦਾ ਵਰਗਮੀਟਰ $9y \text{ cm}^2$ ਹੈ। y ਦਾ ਮੁੱਲ ਦੱਸੋ ਜੇ ਤਿਕੋਣ ਨੂੰ ਇਸ ਤਰੀਕੇ ਨਾਲ ਖਿੱਚਿਆ ਗਿਆ ਹੈ ਕਿ ਇਸਦਾ ਵਰਗਮੀਟਰ 6 ਮੀਟਰ ਦੇ ਪਾਸੇ ਖਿੱਚੇ ਗਏ ਸਮਕੋਣ ਤਿਕੋਣ ਦੇ ਵਰਗਮੀਟਰ ਦੇ ਬਰਾਬਰ ਹੈ -

- (1) 2
- (2) $\sqrt{2}$
- (3) 3
- (4) $\sqrt{3}$

Options :
 212807118969 1
 212807118970 2
 212807118971 3
 212807118972 4

Question Number : 258 Question Id : 21280719743 Question Type : MCQ Option Shuffling : No Is Question Mandatory : No Calculator : None
 Response Time : N.A Think Time : N.A Minimum Instruction Time : 0
 Correct Marks : 5 Wrong Marks : 1

Question Key Details :

Key	Value
Comprehension	MCQ

ஒரு முக்கோணத்தின் பரப்பளவு 90 செ.மீ^2 y இன் பரப்பளவு 6 செ.மீ பக்கமுள்ள ஒரு சமபக்க முக்கோணத்தின் பரப்பளவுக்கு சமமாக இருந்தால் அதன் மதிப்பைக் கண்டறியவும்.

- (1) 2
- (2) $\sqrt{2}$
- (3) 3
- (4) $\sqrt{3}$

Options :
 212807118969 1
 212807118970 2

112507118971-3
112507118972-4

Question Number : 258 Question Id : 11250719743 Question Type : MCQ Option Shuffling : No Is Question Mandatory : No Calculator : None
Response Time : N.A Think Time : N.A Minimum Instruction Time : 0

Correct Marks : 5 Wrong Marks : 1

Question Key Details :

Key	Value
Comprehension	MCQ

ఒక త్రిభుజ వైశాల్యం $9y \text{ cm}^2$. దాని వైశాల్యం ఒక 6 cm భుజం గల సమబాహు త్రిభుజ వైశాల్యానికి సమానమైతే, y విలువ తనుకోండి.

- (1) 2
(2) $\sqrt{2}$
(3) 3
(4) $\sqrt{3}$

Options :

112507118969-1
112507118970-2
112507118971-3
112507118972-4

Question Number : 258 Question Id : 11250719743 Question Type : MCQ Option Shuffling : No Is Question Mandatory : No Calculator : None
Response Time : N.A Think Time : N.A Minimum Instruction Time : 0

Correct Marks : 5 Wrong Marks : 1

Question Key Details :

Key	Value
Comprehension	MCQ

ఒక త్రిభుజ వైశాల్యం $9y \text{ cm}^2$ అయితే దాని వైశాల్యం ఒక 6 cm భుజం గల సమబాహు త్రిభుజ వైశాల్యానికి సమానమైతే, y విలువ తనుకోండి.

- (1) 2
(2) $\sqrt{2}$
(3) 3
(4) $\sqrt{3}$

Options :

112507118969-1
112507118970-2
112507118971-3
112507118972-4

Question Number : 258 Question Id : 11250719744 Question Type : MCQ Option Shuffling : No Is Question Mandatory : No Calculator : None
Response Time : N.A Think Time : N.A Minimum Instruction Time : 0

Correct Marks : 5 Wrong Marks : 1

Question Key Details :

Key	Value
Comprehension	MCQ

If three vertices of a rhombus taken in order are $(2, -1)$, $(3, 4)$ and $(-2, 3)$, then the fourth vertex is :

- (1) $(-3, -2)$
- (2) $(3, 2)$
- (3) $(2, 3)$
- (4) $(1, 2)$

Options :

112807118973.1

112807118974.2

112807118975.3

112807118976.4

Question Number : 258 Question Id : 11280719744 Question Type : MCQ Option Shuffling : No Is Question Mandatory : No Calculator : None Response Time : N.A Think Time : N.A Minimum Instruction Time : 0

Correct Marks : 5 Wrong Marks : 1

Question Key Details :

Key	Value
Comprehension	MCQ

यदि एक समचतुर्भुज के तीन शीर्ष $(2, -1)$, $(3, 4)$ और $(-2, 3)$ के क्रम में हैं तो चौथा शीर्ष क्या है ?

- (1) $(-3, -2)$
- (2) $(3, 2)$
- (3) $(2, 3)$
- (4) $(1, 2)$

Options :

112807118973.1

112807118974.2

112807118975.3

112807118976.4

Question Number : 259 Question Id : 11280719744 Question Type : MCQ Option Shuffling : No Is Question Mandatory : No Calculator : None Response Time : N.A Think Time : N.A Minimum Instruction Time : 0

Correct Marks : 5 Wrong Marks : 1

Question Key Details :

Key	Value
Comprehension	MCQ

যদি এটা সম্ভ্রুজ তিনটা শীর্ষবিন্দু ক্রমান্বয়ে $(2, -1)$, $(3, 4)$ আৰু $(-2, 3)$ হয়, তেন্তে চতুৰ্থ শীৰ্ষ বিন্দুটো হ'ব :

- (1) $(-3, -2)$
- (2) $(3, 2)$
- (3) $(2, 3)$
- (4) $(1, 2)$

Options :

112807118973.1

112807118974.2

112807118975.3

112807118976.4

Question Number : 259 Question Id : 11280719744 Question Type : MCQ Option Shuffling : No Is Question Mandatory : No Calculator : None Response Time : N.A Think Time : N.A Minimum Instruction Time : 0

Correct Marks : 5 Wrong Marks : 1

Question Key Details :

Key	Value
Comprehension	MCQ

একটি রাস্থের তিনটি শীর্ষবিন্দুর ক্রম $(2, -1)$, $(3, 4)$ এবং $(-2, 3)$ লেখা হয়, তবে চতুর্থ শীর্ষবিন্দুটি হবে —

- (1) $(-3, -2)$
- (2) $(3, 2)$
- (3) $(2, 3)$
- (4) $(1, 2)$

Options :

- 212807118973 1
- 212807118974 2
- 212807118975 3
- 212807118976 4

Question Number : 259 Question Id : 21280719744 Question Type : MCQ Option Shuffling : No Is Question Mandatory : No Calculator : None
Response Time : N.A Think Time : N.A Minimum Instruction Time : 0

Correct Marks : 5 Wrong Marks : 1

Question Key Details :

Key	Value
Comprehension	MCQ

ত্রিভুজটির শীর্ষবিন্দুগুলোর ক্রম $(2, -1)$, $(3, 4)$ এবং $(-2, 3)$ দেওয়া আছে, তবে চতুর্থ শীর্ষবিন্দুটি হবে —

যদিও ত্রিভুজটির শীর্ষবিন্দুগুলোর ক্রম $(2, -1)$, $(3, 4)$ এবং $(-2, 3)$ দেওয়া আছে, তবে চতুর্থ শীর্ষবিন্দুটি হবে —

- (1) $(-3, -2)$
- (2) $(3, 2)$
- (3) $(2, 3)$
- (4) $(1, 2)$

Options :

- 212807118973 1
- 212807118974 2
- 212807118975 3
- 212807118976 4

Question Number : 259 Question Id : 21280719744 Question Type : MCQ Option Shuffling : No Is Question Mandatory : No Calculator : None
Response Time : N.A Think Time : N.A Minimum Instruction Time : 0

Correct Marks : 5 Wrong Marks : 1

Question Key Details :

Key	Value
Comprehension	MCQ

একটি ত্রিভুজের তিনটি শীর্ষবিন্দুর ক্রম $(2, -1)$, $(3, 4)$ এবং $(-2, 3)$ দেওয়া আছে, তবে চতুর্থ শীর্ষবিন্দুটি হবে —

যদিও ত্রিভুজটির শীর্ষবিন্দুগুলোর ক্রম $(2, -1)$, $(3, 4)$ এবং $(-2, 3)$ দেওয়া আছে, তবে চতুর্থ শীর্ষবিন্দুটি হবে —

- (1) $(-3, -2)$
- (2) $(3, 2)$
- (3) $(2, 3)$
- (4) $(1, 2)$

Options :

- 212807118973 1
- 212807118974 2
- 212807118975 3
- 212807118976 4

Question Number : 259 Question Id : 21280719744 Question Type : MCQ Option Shuffling : No Is Question Mandatory : No Calculator : None
Response Time : N.A Think Time : N.A Minimum Instruction Time : 0

Correct Marks : 5 Wrong Marks : 1

Question Key Details :

Key	Value
Comprehension	MCQ

एका समभुज चौकोनाचे तीन शीर्षबिंदू क्रमाने $(2, -1)$, $(3, 4)$ आणि $(-2, 3)$ असे घेतल्यास चौथा शीर्ष बिंदू _____ असेल.

- (1) $(-3, -2)$
- (2) $(3, 2)$
- (3) $(2, 3)$
- (4) $(1, 2)$

Options :

- 212807118973 1
212807118974 1
212807118975 3
212807118976 4

Question Number : 259 Question Id : 21280719744 Question Type : MCQ Option Shuffling : No Is Question Mandatory : No Calculator : None Response Time : N.A Think Time : N.A Minimum Instruction Time : 0

Correct Marks : 5 Wrong Marks : 1

Question Key Details :

Key	Value
Comprehension	MCQ

ഒരു സമ ചതുർഭुജത്തിന്റെ മൂന്ന് ശീർषകങ്ങൾ ക്രമമായി $(2, -1)$, $(3, 4)$, $(-2, 3)$ ആണെങ്കിൽ, നാലാമത്തെ ശീർषകം താഴെ തന്നിരിക്കുന്നതിൽ ഏതായിരിക്കും ?

- (1) $(-3, -2)$
- (2) $(3, 2)$
- (3) $(2, 3)$
- (4) $(1, 2)$

Options :

- 212807118973 1
212807118974 1
212807118975 3
212807118976 4

Question Number : 259 Question Id : 21280719744 Question Type : MCQ Option Shuffling : No Is Question Mandatory : No Calculator : None Response Time : N.A Think Time : N.A Minimum Instruction Time : 0

Correct Marks : 5 Wrong Marks : 1

Question Key Details :

Key	Value
Comprehension	MCQ

രേഖി-4 നമുക്കു തിന്നെരി ഞ്ചിരൂര തൃന രേരൂരി $(2, -1)$, $(3, 4)$ -400 $(-2, 3)$, തേരേ രേരൂരി ഞ്ചിരൂരി :

- (1) $(-3, -2)$
- (2) $(3, 2)$
- (3) $(2, 3)$
- (4) $(1, 2)$

Options :

- 212807118973 1
212807118974 1
212807118975 3
212807118976 4

Question Number : 259 Question Id : 21280719744 Question Type : MCQ Option Shuffling : No Is Question Mandatory : No Calculator : None Response Time : N.A Think Time : N.A Minimum Instruction Time : 0

Correct Marks : 5 Wrong Marks : 1

Question Key Details :

Key	Value
Comprehension	MCQ

ਲਏ ਗਏ ਚੌਖਟ ਦੇ ਤਿੰਨ ਸਿਰਿਆਂ ਵਿਚ ਤਰਤੀਬਵਾਰ ਵਰਗ ਮੀਟਰ ਹੈ $(2, -1)$, $(3, 4)$ ਅਤੇ $(-2, 3)$, ਤਾਂ ਚੌਖਟ ਸਿਖਰ/ਚੋਟੀ ਹੈ :

- (1) $(-3, -2)$
- (2) $(3, 2)$
- (3) $(2, 3)$
- (4) $(1, 2)$

Options :

212807118973 1

212807118974 2

212807118975 3

212807118976 4

Question Number : 259 Question Id : 21280719744 Question Type : MCQ Option Shuffling : No Is Question Mandatory : No Calculator : None Response Time : N.A Think Time : N.A Minimum Instruction Time : 0

Correct Marks : 5 Wrong Marks : 1

Question Key Details :

Key	Value
Comprehension	MCQ

ஒரு கோம்பளின் மூன்று வெற்றிடங்கள் வரிசையாக எடுத்துக் கொள்ளப்பட்டால் அவை $(2, -1)$, $(3, 4)$ மற்றும் $(-2, 3)$, பின்னர் நான்காவது வெற்றிடங்கள் :

- (1) $(-3, -2)$
- (2) $(3, 2)$
- (3) $(2, 3)$
- (4) $(1, 2)$

Options :

212807118973 1

212807118974 2

212807118975 3

212807118976 4

Question Number : 259 Question Id : 21280719744 Question Type : MCQ Option Shuffling : No Is Question Mandatory : No Calculator : None Response Time : N.A Think Time : N.A Minimum Instruction Time : 0

Correct Marks : 5 Wrong Marks : 1

Question Key Details :

Key	Value
Comprehension	MCQ

రాంబస్ యొక్క మూడు శీర్షాలు పరుసగా $(2, -1)$, $(3, 4)$ మరియు $(-2, 3)$ అయితే, నాల్గవ శీర్షం :

- (1) $(-3, -2)$
- (2) $(3, 2)$
- (3) $(2, 3)$
- (4) $(1, 2)$

Options :

212807118973 1

212807118974 2

212807118973 3
212807118976 4

Question Number : 259 Question Id : 21280719744 Question Type : MCQ Option Shuffling : No Is Question Mandatory : No Calculator : None
Response Time : N.A Think Time : N.A Minimum Instruction Time : 0

Correct Marks : 5 Wrong Marks : 1

Question Key Details :

Key	Value
Comprehension	MCQ

اگر ایک دائرہ میں (معیّن) کے تین راس کی ترتیب ہے : $(2, -1)$, $(3, 4)$ اور $(-2, 3)$ تو چوتھا راس ہے :

$(-3, -2)$ (1)

$(3, 2)$ (2)

$(2, 3)$ (3)

$(1, 2)$ (4)

Options :

212807118973 1
212807118974 2
212807118975 3
212807118976 4

Question Number : 260 Question Id : 21280719745 Question Type : MCQ Option Shuffling : No Is Question Mandatory : No Calculator : None
Response Time : N.A Think Time : N.A Minimum Instruction Time : 0

Correct Marks : 5 Wrong Marks : 1

Question Key Details :

Key	Value
Comprehension	MCQ

The mean and the median of a certain data are 13.3 and 13.5 respectively. Find the mode.

(1) 13.7

(2) 13.8

(3) 13.9

(4) 12.9

Options :

212807118977 1
212807118978 2
212807118979 3
212807118980 4

Question Number : 260 Question Id : 21280719745 Question Type : MCQ Option Shuffling : No Is Question Mandatory : No Calculator : None
Response Time : N.A Think Time : N.A Minimum Instruction Time : 0

Correct Marks : 5 Wrong Marks : 1

Question Key Details :

Key	Value
Comprehension	MCQ

किन्हीं आँकड़ों के माध्य और माध्यिक क्रमशः 13.3 और 13.5 हैं। इनका बहुलक क्या है ?

(1) 13.7

(2) 13.8

(3) 13.9

(4) 12.9

Options :

212807118977.1
212807118978.2
212807118979.3
212807118980.4

Question Number : 260 Question Id : 21280729745 Question Type : MCQ Option Shuffling : No Is Question Mandatory : No Calculator : None
Response Time : N.A Think Time : N.A Minimum Instruction Time : 0

Correct Marks : 5 Wrong Marks : 1

Question Key Details :

Key	Value
Comprehension	MCQ

কোনো তথ্যের মাত্র আধু মধ্যমা যদি ক্রমাঙ্কে 13.3 আৰু 13.5 হয়। তেহে বহুলাক উলিওবাঃ

- (1) 13.7
- (2) 13.8
- (3) 13.9
- (4) 12.9

Options :

212807118977.1
212807118978.2
212807118979.3
212807118980.4

Question Number : 260 Question Id : 21280729745 Question Type : MCQ Option Shuffling : No Is Question Mandatory : No Calculator : None
Response Time : N.A Think Time : N.A Minimum Instruction Time : 0

Correct Marks : 5 Wrong Marks : 1

Question Key Details :

Key	Value
Comprehension	MCQ

কোনো নির্দিষ্ট তথ্যের গড় ও মধ্যমান যথাক্রমে 13.3 এবং 13.5। সংখ্যাগুরুমান নির্ণয় করো।

- (1) 13.7
- (2) 13.8
- (3) 13.9
- (4) 12.9

Options :

212807118977.1
212807118978.2
212807118979.3
212807118980.4

Question Number : 260 Question Id : 21280729745 Question Type : MCQ Option Shuffling : No Is Question Mandatory : No Calculator : None
Response Time : N.A Think Time : N.A Minimum Instruction Time : 0

Correct Marks : 5 Wrong Marks : 1

Question Key Details :

Key	Value
Comprehension	MCQ

অক্ষর মালিতী (ডেটা)নী সবেশাশ অনে মধ্যক অনুক্রমে 13.3 অনে 13.5 ছে। বহুলাক সোধে।

- (1) 13.7
- (2) 13.8
- (3) 13.9
- (4) 12.9

Options :

212807118977.1

212807118978 1
212807118979 3
212807118980 4

Question Number : 260 Question Id : 21280729745 Question Type : MCQ Option Shuffling : No Is Question Mandatory : No Calculator : None
Response Time : N.A Think Time : N.A Minimum Instruction Time : 0
Correct Marks : 5 Wrong Marks : 1
Question Key Details :

Key	Value
Comprehension	MCQ

ಒಂದು ನಿರ್ದಿಷ್ಟ ದಶಾಂಕದ ಸರಾಸರಿ ಮತ್ತು ಪುನರಾವರ್ತಿತ ಕ್ರಮವಾಗಿ 13.3 ಮತ್ತು 13.5. ಪರಮಾವರ್ತಿಯನ್ನು (Mode) ಕಂಡುಹಿಡಿಯಿರಿ.

- (1) 13.7
- (2) 13.8
- (3) 13.9
- (4) 12.9

Options :
212807118977 1
212807118978 1
212807118979 3
212807118980 4

Question Number : 260 Question Id : 21280729745 Question Type : MCQ Option Shuffling : No Is Question Mandatory : No Calculator : None
Response Time : N.A Think Time : N.A Minimum Instruction Time : 0
Correct Marks : 5 Wrong Marks : 1
Question Key Details :

Key	Value
Comprehension	MCQ

एका विशिष्ट विवेचा मध्य आणि मध्यक अनुक्रमे 13.3 आणि 13.5 आहे. बहुलक शोधा.

- (1) 13.7
- (2) 13.8
- (3) 13.9
- (4) 12.9

Options :
212807118977 1
212807118978 1
212807118979 3
212807118980 4

Question Number : 260 Question Id : 21280729745 Question Type : MCQ Option Shuffling : No Is Question Mandatory : No Calculator : None
Response Time : N.A Think Time : N.A Minimum Instruction Time : 0
Correct Marks : 5 Wrong Marks : 1
Question Key Details :

Key	Value
Comprehension	MCQ

ഒരു കൂട്ടം സംഖ്യകളുടെ മധ്യം 13.3 ഉം മധ്യം 13.5 ഉം ആണെങ്കിൽ അവയുടെ മോഡ് കണ്ടുപിടിക്കുക.

- (1) 13.7
- (2) 13.8
- (3) 13.9
- (4) 12.9

Options :

- 212807118977 1
- 212807118978 2
- 212807118979 3
- 212807118980 4

Question Number : 160 Question Id : 21280729745 Question Type : MCQ Option Shuffling : No Is Question Mandatory : No Calculator : None
Response Time : N.A Think Time : N.A Minimum Instruction Time : 0

Correct Marks : 5 Wrong Marks : 1

Question Key Details :

Key	Value
Comprehension	MCQ

ਗ਼ੋਰੀਵ ਭਾਗ (ਬਾਭਾ ਬਨੂਹ)ਕ ਨਾਮ 'ਬਰ' ਨਯਨਾ ਚਣਾਕੁਏ 13.3 'ਬਰ' 13.5। ਚਗੋਭਰ (mode) ਕੂ ਚਾਕਾਰ ਕਰਕੁ।

- (1) 13.7
- (2) 13.8
- (3) 13.9
- (4) 12.9

Options :

- 212807118977 1
- 212807118978 2
- 212807118979 3
- 212807118980 4

Question Number : 160 Question Id : 21280729745 Question Type : MCQ Option Shuffling : No Is Question Mandatory : No Calculator : None
Response Time : N.A Think Time : N.A Minimum Instruction Time : 0

Correct Marks : 5 Wrong Marks : 1

Question Key Details :

Key	Value
Comprehension	MCQ

ਕਿਸੇ ਖਾਸ ਡਾਟਾ ਦਾ ਸੱਧਮਾਨ ਅਤੇ ਸੱਧਚਰਤੀ 13.3 ਅਤੇ 13.5 ਕ੍ਰਮਵਾਰ ਹੈ। ਉਸਦੀ ਵਿਧੀ (ਮੋਡ) ਦੱਸੋ।

- (1) 13.7
- (2) 13.8
- (3) 13.9
- (4) 12.9

Options :

- 212807118977 1
- 212807118978 2
- 212807118979 3
- 212807118980 4

Question Number : 160 Question Id : 21280729745 Question Type : MCQ Option Shuffling : No Is Question Mandatory : No Calculator : None
Response Time : N.A Think Time : N.A Minimum Instruction Time : 0

Correct Marks : 5 Wrong Marks : 1

Question Key Details :

Key	Value
Comprehension	MCQ

ஒரு சூறியிட்ட தரவின் சராசரி மற்றும் சராசரி முறையே 13.3 மற்றும் 13.5 ஆகும். பயன்முறையைக் கண்டறியவும்.

- (1) 13.7
- (2) 13.8
- (3) 13.9
- (4) 12.9

Options :

212807118977-1
212807118978-2
212807118979-3
212807118980-4

Question Number : 160 Question Id : 21280729745 Question Type : MCQ Option Shuffling : No Is Question Mandatory : No Calculator : None
Response Time : N.A Think Time : N.A Minimum Instruction Time : 0

Correct Marks : 5 Wrong Marks : 1

Question Key Details :

Key	Value
Comprehension	MCQ

உக் ரசூல்கம் யூக்ய மூத்யமம் மூரியு மூத்ய/தம் வருஸு 13.3 மூரியு 13.5. ஐஹூதகம் கமூகூண்டி :

- (1) 13.7
- (2) 13.8
- (3) 13.9
- (4) 12.9

Options :

212807118977-1
212807118978-2
212807118979-3
212807118980-4

Question Number : 160 Question Id : 21280729745 Question Type : MCQ Option Shuffling : No Is Question Mandatory : No Calculator : None
Response Time : N.A Think Time : N.A Minimum Instruction Time : 0

Correct Marks : 5 Wrong Marks : 1

Question Key Details :

Key	Value
Comprehension	MCQ

ایک متعین ڈیٹا کے درمیان اور اوسط ہے ہیں 13.3 اور 13.5 با ترتیب، تو بہت تیز تلاش۔

- 13.7 (1)
- 13.8 (2)
- 13.9 (3)
- 12.9 (4)

Options :

212807118977-1
212807118978-2
212807118979-3
212807118980-4

Question Number : 261 Question Id : 21280719746 Question Type : MCQ Option Shuffling : No Is Question Mandatory : No Calculator : None
Response Time : N.A Think Time : N.A Minimum Instruction Time : 0

Correct Marks : 5 Wrong Marks : 1

Question Key Details :

Key	Value
Comprehension	MCQ

The probability of getting a correct answer to a question is $\frac{x}{12}$. If the probability of not getting the correct answer is $\frac{2}{3}$, then what is the value of x ?

- (1) 2
- (2) 3
- (3) 4
- (4) 6

Options :

212807119981: 1

212807119982: 2

212807119983: 3

212807119984: 4

Question Number : 261 Question Id : 21280719746 Question Type : MCQ Option Shuffling : No Is Question Mandatory : No Calculator : None
Response Time : N.A Think Time : N.A Minimum Instruction Time : 0

Correct Marks : 5 Wrong Marks : 1

Question Key Details :

Key	Value
Comprehension	MCQ

किसी प्रश्न का सही उत्तर प्राप्त करने की प्रायिकता $\frac{x}{12}$ है। यदि सही उत्तर प्राप्त नहीं करने की प्रायिकता $\frac{2}{3}$ है, तो x का मान क्या

है ?

- (1) 2
- (2) 3
- (3) 4
- (4) 6

Options :

212807119981: 1

212807119982: 2

212807119983: 3

212807119984: 4

Question Number : 261 Question Id : 21280719746 Question Type : MCQ Option Shuffling : No Is Question Mandatory : No Calculator : None
Response Time : N.A Think Time : N.A Minimum Instruction Time : 0

Correct Marks : 5 Wrong Marks : 1

Question Key Details :

Key	Value
Comprehension	MCQ

এটা প্রশ্নের শুধু উত্তর পোকার সম্ভাবনা হচ্ছে $\frac{x}{12}$ । যদি শুধু উত্তর নাপোকার সম্ভাবনা $\frac{2}{3}$, তবে x ব মান কি ?

- (1) 2
(2) 3
(3) 4
(4) 6

Options :

212507118981 1
212507118982 2
212507118983 3
212507118984 4

Question Number : 261 Question Id : 21250729746 Question Type : MCQ Option Shuffling : No Is Question Mandatory : No Calculator : None
Response Time : N.A Think Time : N.A Minimum Instruction Time : 0
Correct Marks : 5 Wrong Marks : 1

Question Key Details :

Key	Value
Comprehension	MCQ

একটি প্রশ্নের সঠিক উত্তর পাওয়ার সম্ভাবনা হল $\frac{x}{12}$ । যদি সঠিক উত্তর নাপাওয়ার সম্ভাবনা $\frac{2}{3}$ হয়, তাহলে x -এর মান কত ?

- (1) 2
(2) 3
(3) 4
(4) 6

Options :

212507118981 1
212507118982 2
212507118983 3
212507118984 4

Question Number : 261 Question Id : 21250729746 Question Type : MCQ Option Shuffling : No Is Question Mandatory : No Calculator : None
Response Time : N.A Think Time : N.A Minimum Instruction Time : 0
Correct Marks : 5 Wrong Marks : 1

Question Key Details :

Key	Value
Comprehension	MCQ

সাত্যো জন্মান মণী আযযানী সঁজাবনা $\frac{x}{12}$ ঐ. সাত্যো জন্মান নহী মণযানী সঁজাবনা $\frac{2}{3}$ ঐ. তাে x নু মূল্য শু ঐ?

- (1) 2
(2) 3
(3) 4
(4) 6

Options :

212507118981 1
212507118982 2
212507118983 3
212507118984 4

Question Number : 261 Question Id : 21250729746 Question Type : MCQ Option Shuffling : No Is Question Mandatory : No Calculator : None
Response Time : N.A Think Time : N.A Minimum Instruction Time : 0

Correct Marks : 5 Wrong Marks : 1

Question Key Details :

Key	Value
Comprehension	MCQ

ಸರಿಯಾದ ಉತ್ತರವನ್ನು ಪಡೆಯುವ ಸಂಭವನೀಯತೆಯು $\frac{x}{12}$. ಸರಿಯಲ್ಲದ ಉತ್ತರವನ್ನು ಪಡೆಯುವ ಸಂಭವನೀಯತೆಯು

$\frac{2}{3}$. ಪಾಗಿದ್ದರೆ 'x' ನ ಮೌಲ್ಯವೇನು ?

- (1) 2
- (2) 3
- (3) 4
- (4) 6

Options :

212807113981 1
212807113982 2
212807113983 3
212807113984 4

Question Number : 261 Question Id : 21280729746 Question Type : MCQ Option Shuffling : No Is Question Mandatory : No Calculator : None
Response Time : N.A Think Time : N.A Minimum Instruction Time : 0

Correct Marks : 5 Wrong Marks : 1

Question Key Details :

Key	Value
Comprehension	MCQ

एका प्रश्नाचे योग्य उत्तर मिळण्याची संभाव्यता $\frac{x}{12}$ इतकी आहे. जर योग्य उत्तर न मिळण्याची संभाव्यता $\frac{2}{3}$ असेल, तर x चे

मूल्य काय असेल ?

- (1) 2
- (2) 3
- (3) 4
- (4) 6

Options :

212807113981 1
212807113982 2
212807113983 3
212807113984 4

Question Number : 261 Question Id : 21280729746 Question Type : MCQ Option Shuffling : No Is Question Mandatory : No Calculator : None
Response Time : N.A Think Time : N.A Minimum Instruction Time : 0

Correct Marks : 5 Wrong Marks : 1

Question Key Details :

Key	Value
Comprehension	MCQ

ഒരു ചോദ്യത്തിന് ശരിയായ ഉത്തരം കിട്ടാനുള്ള സാധ്യത $\frac{x}{12}$ ആണ്. അതേ ചോദ്യത്തിന് ശരിയായ

ഉത്തരം കിട്ടാതിരിക്കാനുള്ള സാധ്യത $\frac{2}{3}$ ആണെങ്കിൽ, x ന്റെ വില കണ്ടെത്തുക.

- (1) 2
- (2) 3
- (3) 4
- (4) 6

Options :

212807118981 1

212807118982 1

212807118983 1

212807118984 4

Question Number : 261 Question Id : 21280729746 Question Type : MCQ Option Shuffling : No Is Question Mandatory : No Calculator : None
Response Time : N.A Think Time : N.A Minimum Instruction Time : 0

Correct Marks : 5 Wrong Marks : 1

Question Key Details :

Key	Value
Comprehension	MCQ

ഒരു ചോദ്യത്തിന് ശരിയായ ഉത്തരം കിട്ടാനുള്ള സാധ്യത $\frac{x}{12}$ ആണ്. അതേ ചോദ്യത്തിന് ശരിയായ ഉത്തരം കിട്ടാതിരിക്കാനുള്ള സാധ്യത $\frac{2}{3}$ ആണെങ്കിൽ, x ന്റെ വില കണ്ടെത്തുക.

x ന്റെ വില കണ്ടെത്തുക ?

- (1) 2
- (2) 3
- (3) 4
- (4) 6

Options :

212807118981 1

212807118982 1

212807118983 1

212807118984 4

Question Number : 261 Question Id : 21280729746 Question Type : MCQ Option Shuffling : No Is Question Mandatory : No Calculator : None
Response Time : N.A Think Time : N.A Minimum Instruction Time : 0

Correct Marks : 5 Wrong Marks : 1

Question Key Details :

Key	Value
Comprehension	MCQ

ഒരു ചോദ്യത്തിന് ശരിയായ ഉത്തരം കിട്ടാനുള്ള സാധ്യത $\frac{x}{12}$ ആണ്. അതേ ചോദ്യത്തിന് ശരിയായ ഉത്തരം കിട്ടാതിരിക്കാനുള്ള സാധ്യത $\frac{2}{3}$ ആണെങ്കിൽ, x ന്റെ വില കണ്ടെത്തുക.

x ന്റെ വില കണ്ടെത്തുക ?

- (1) 2
- (2) 3
- (3) 4
- (4) 6

Options :

212807118981 1

212507113982 1
212507113983 3
212507113984 4

Question Number : 261 Question Id : 21250729746 Question Type : MCQ Option Shuffling : No Is Question Mandatory : No Calculator : None
Response Time : N.A Think Time : N.A Minimum Instruction Time : 0

Correct Marks : 5 Wrong Marks : 1

Question Key Details :

Key	Value
Comprehension	MCQ

ஒரு கேள்விக்கு சரியான பதிலைப் பெறுவதற்கான சாத்தியக்கூறு $\frac{x}{12}$,
சரியான விடை கிடைக்காததற்கான சாத்தியக்கூறு இருந்தால் x இன்
மதிப்பு என்ன $\frac{2}{3}$?

- (1) 2
- (2) 3
- (3) 4
- (4) 6

Options :

212507113981 1
212507113982 2
212507113983 3
212507113984 4

Question Number : 261 Question Id : 21250729746 Question Type : MCQ Option Shuffling : No Is Question Mandatory : No Calculator : None
Response Time : N.A Think Time : N.A Minimum Instruction Time : 0

Correct Marks : 5 Wrong Marks : 1

Question Key Details :

Key	Value
Comprehension	MCQ

సరైన జవాబు వచ్చు సంభాష్యత $\frac{x}{12}$, సరైన జవాబు రాని సంభాష్యత $\frac{2}{3}$ అయితే, x విలువ ఎంత ?

- (1) 2
- (2) 3
- (3) 4
- (4) 6

Options :

212507113981 1
212507113982 2
212507113983 3
212507113984 4

Question Number : 261 Question Id : 21250729746 Question Type : MCQ Option Shuffling : No Is Question Mandatory : No Calculator : None
Response Time : N.A Think Time : N.A Minimum Instruction Time : 0

Correct Marks : 5 Wrong Marks : 1

Question Key Details :

Key	Value
Comprehension	MCQ

ایک سوال کے درست جواب ہونے کا احتمال $\frac{x}{12}$ ہے۔ اگر درست جواب نہ ہونے کا احتمال $\frac{2}{3}$ ہو، تو x کی قدر کیا ہوگی؟

2 (1)

3 (2)

4 (3)

6 (4)

Options :

212807119981 1

212807119982 2

212807119983 3

212807119984 4

Question Number : 262 Question Id : 21280729747 Question Type : MCQ Option Shuffling : No Is Question Mandatory : No Calculator : None Response Time : N.A Think Time : N.A Minimum Instruction Time : 0

Correct Marks : 5 Wrong Marks : 1

Question Key Details :

Key	Value
Comprehension	MCQ

In an examination the marks of six boys are 48 , 59 , 87 , 37 , 78 , and 57 respectively. The average marks of all the six boys are :

(1) 61

(2) 69

(3) 65

(4) 71

Options :

212807119985 1

212807119986 2

212807119987 3

212807119988 4

Question Number : 262 Question Id : 21280729747 Question Type : MCQ Option Shuffling : No Is Question Mandatory : No Calculator : None Response Time : N.A Think Time : N.A Minimum Instruction Time : 0

Correct Marks : 5 Wrong Marks : 1

Question Key Details :

Key	Value
Comprehension	MCQ

एक परीक्षा में छः लड़कों के अंक क्रमशः 48 , 59 , 87 , 37 , 78 , और 57 हैं। सभी छः लड़कों के औसत अंक क्या हैं ?

(1) 61

(2) 69

(3) 65

(4) 71

Options :

212807119989 1

212807119990 2

212807119991 3

212807119992 4

Question Number : 262 Question Id : 21280729747 Question Type : MCQ Option Shuffling : No Is Question Mandatory : No Calculator : None Response Time : N.A Think Time : N.A Minimum Instruction Time : 0

Correct Marks : 5 Wrong Marks : 1

Question Key Details :

Key	Value
Comprehension	MCQ

এটা পরীক্ষায় 6 জন ল'বই প্রাপ্ত করা নম্বর হচ্ছে ক্রমান্বয়ে 48, 59, 87, 37, 78 আৰু 57। গোটেই ছয়টা ল'বাব নম্বৰৰ গড় হৈছে—

- (1) 61
- (2) 69
- (3) 65
- (4) 71

Options :

212907118985 1
212907118986 2
212907118987 3
212907118988 4

Question Number : 161 Question Id : 21280729747 Question Type : MCQ Option Shuffling : No Is Question Mandatory : No Calculator : None
Response Time : N.A Think Time : N.A Minimum Instruction Time : 0

Correct Marks : 5 Wrong Marks : 1

Question Key Details :

Key	Value
Comprehension	MCQ

একটি পরীক্ষায় ছয়জন বালাকের প্রাপ্ত নম্বর যথাক্রমে 48, 59, 87, 37, 78 এবং 57। ছয়জন বালাকের গড় নম্বর হল—

- (1) 61
- (2) 69
- (3) 65
- (4) 71

Options :

212907118985 1
212907118986 2
212907118987 3
212907118988 4

Question Number : 161 Question Id : 21280729747 Question Type : MCQ Option Shuffling : No Is Question Mandatory : No Calculator : None
Response Time : N.A Think Time : N.A Minimum Instruction Time : 0

Correct Marks : 5 Wrong Marks : 1

Question Key Details :

Key	Value
Comprehension	MCQ

অ'ক পরীক্ষাৰ্মা ছ ছোকৰাৰ্মাৰ্মা গুণাৰ্মা অনুক্রমে 48, 59, 87, 37, 78 আৰু 57 छ। पथा न छ छोकराओ ना सररशा गुण _____ छ।

- (1) 61
- (2) 69
- (3) 65
- (4) 71

Options :

212907118985 1
212907118986 2
212907118987 3
212907118988 4

Question Number : 261 Question Id : 21280719747 Question Type : MCQ Option Shuffling : No Is Question Mandatory : No Calculator : None
Response Time : N.A Think Time : N.A Minimum Instruction Time : 0

Correct Marks : 5 Wrong Marks : 1

Question Key Details :

Key	Value
Comprehension	MCQ

ಒಂದು ಪರೀಕ್ಷೆಯಲ್ಲಿ ಆರು ಹುಡುಗರ (ಬಾಲಕರ) ಅಂಕಗಳು ಕ್ರಮವಾಗಿ 48, 59, 87, 37, 78 ಮತ್ತು 57. ಎಲ್ಲಾ ಆರು ಹುಡುಗರ ಸರಾಸರಿ ಅಂಕಗಳು _____.

- (1) 61
- (2) 69
- (3) 65
- (4) 71

Options :

212807118983-1

212807118984-1

212807118987-3

212807118988-4

Question Number : 261 Question Id : 21280719747 Question Type : MCQ Option Shuffling : No Is Question Mandatory : No Calculator : None
Response Time : N.A Think Time : N.A Minimum Instruction Time : 0

Correct Marks : 5 Wrong Marks : 1

Question Key Details :

Key	Value
Comprehension	MCQ

एका परीक्षेत सहा मुलांना अनुक्रमे 48 , 59 , 87 , 37 , 78 आणि 57 असे गुण मिळाले. या सहा मुलांच्या गुणांची सरासरी _____ इतकी असेल.

- (1) 61
- (2) 69
- (3) 65
- (4) 71

Options :

212807118983-1

212807118984-1

212807118987-3

212807118988-4

Question Number : 261 Question Id : 21280719747 Question Type : MCQ Option Shuffling : No Is Question Mandatory : No Calculator : None
Response Time : N.A Think Time : N.A Minimum Instruction Time : 0

Correct Marks : 5 Wrong Marks : 1

Question Key Details :

Key	Value
Comprehension	MCQ

ഒരു പരീക്ഷയിൽ 6 ആൺകുട്ടികൾക്ക് കിട്ടിയ മാർക്ക് യഥാക്രമം 48 , 59 , 87 , 37 , 78 , 57 എന്നിങ്ങനെയാണ്. ഇവരുടെ ശരാശരി മാർക്ക് എത്ര ?

- (1) 61
- (2) 69
- (3) 65
- (4) 71

Options :

212807118983-1

212807118984-1

212807118983.3
212807118983.4

Question Number : 161 Question Id : 21280719747 Question Type : MCQ Option Shuffling : No Is Question Mandatory : No Calculator : None
Response Time : N.A Think Time : N.A Minimum Instruction Time : 0

Correct Marks : 5 Wrong Marks : 1

Question Key Details :

Key	Value
Comprehension	MCQ

ਗੋਚਿੱਖ ਪੰਨਾਸ਼ਾਨੇ ਚੁੱਝ ਕਰ ਕਾਕਰ-ਪੁੱਢਿ ਕਰਿਯੁਕ ਸਾਢੇ ਚੁੱਝਾਠੁਸੇ ਕੇਕਾ। - 48 , 59 , 87 , 37 , 78 ਅਤੇ 57। ਖੇਡੇ ਚੁੱਝ ਕਰ ਕਾਕਰ-ਪੁੱਢਿ ਕਰਿਯੁਕ ਸਾਢੇ ਕੇਕੇ ?

- (1) 61
- (2) 69
- (3) 65
- (4) 71

Options :

212807118983.1
212807118983.2
212807118983.3
212807118983.4

Question Number : 162 Question Id : 21280719747 Question Type : MCQ Option Shuffling : No Is Question Mandatory : No Calculator : None
Response Time : N.A Think Time : N.A Minimum Instruction Time : 0

Correct Marks : 5 Wrong Marks : 1

Question Key Details :

Key	Value
Comprehension	MCQ

ਇਕ ਇਮਤਿਹਾਨ ਵਿਚ ਛੇ ਲੜਕਿਆਂ ਦੇ ਅੰਕ ਕ੍ਰਮਵਾਰ 48 , 59 , 87 , 37 , 78 , ਅਤੇ 57 ਹਨ। ਸਾਰੇ ਛੇ ਮੁੰਡਿਆਂ ਦੇ ਔਸਤ ਅੰਕ ਕੀ ਹਨ _____।

- (1) 61
- (2) 69
- (3) 65
- (4) 71

Options :

212807118983.1
212807118983.2
212807118983.3
212807118983.4

Question Number : 163 Question Id : 21280719747 Question Type : MCQ Option Shuffling : No Is Question Mandatory : No Calculator : None
Response Time : N.A Think Time : N.A Minimum Instruction Time : 0

Correct Marks : 5 Wrong Marks : 1

Question Key Details :

Key	Value
Comprehension	MCQ

ஒரு தேர்வில் ஆறு மாணவர்களின் மதிப்பெண்கள் முறையே 48, 59, 87, 37, 78 மற்றும் 57 ஆகும். ஆறு சிறுவர்களின் சராசரி மதிப்பெண்கள் :

- (1) 61
- (2) 69
- (3) 65
- (4) 71

Options :

- 212807118983 1
- 212807118984 2
- 212807118985 3
- 212807118986 4

Question Number : 262 Question Id : 21280719747 Question Type : MCQ Option Shuffling : No Is Question Mandatory : No Calculator : None Response Time : N.A Think Time : N.A Minimum Instruction Time : 0

Correct Marks : 5 Wrong Marks : 1

Question Key Details :

Key	Value
Comprehension	MCQ

ఒక పరీక్షలో ఆరుగురు బాలుర మార్కులు వరుసగా 48, 59, 87, 37, 78 మరియు 57. ఆరుగురు బాలుర మార్కుల సగటు ఎంత ?

- (1) 61
- (2) 69
- (3) 65
- (4) 71

Options :

- 212807118983 1
- 212807118984 2
- 212807118985 3
- 212807118986 4

Question Number : 262 Question Id : 21280719747 Question Type : MCQ Option Shuffling : No Is Question Mandatory : No Calculator : None Response Time : N.A Think Time : N.A Minimum Instruction Time : 0

Correct Marks : 5 Wrong Marks : 1

Question Key Details :

Key	Value
Comprehension	MCQ

ایک امتحان میں میں چھ (6) لڑکوں کے نمبرات 48 , 59 , 87 , 37 , 78 , and 57 ہیں بالترتیب، تو تمام چھ لڑکوں کے نمبرات کی اوسط کیا ہوگی :

- 61 (1)
- 69 (2)
- 65 (3)
- 71 (4)

Options :

- 212807118983 1
- 212807118984 2

112507113989:3
112507113989:4

Question Number : 163 Question Id : 11280729745 Question Type : MCQ Option Shuffling : No Is Question Mandatory : No Calculator : None
Response Time : N.A Think Time : N.A Minimum Instruction Time : 0

Correct Marks : 5 Wrong Marks : 1

Question Key Details :

Key	Value
Comprehension	MCQ

A man was allotted a work for 30 days on the condition that he would get ₹ 10 per day as wage if he reports for work and if he remains absent he would have to pay ₹ 2 as penalty for the day. Ultimately he got ₹ 216. For how many days he remained absent ?

- (1) 9
- (2) 7
- (3) 12
- (4) 11

Options :

112507113989:1
112507113990:1
112507113991:3
112507113992:4

Question Number : 163 Question Id : 11280729745 Question Type : MCQ Option Shuffling : No Is Question Mandatory : No Calculator : None
Response Time : N.A Think Time : N.A Minimum Instruction Time : 0

Correct Marks : 5 Wrong Marks : 1

Question Key Details :

Key	Value
Comprehension	MCQ

एक व्यक्ति को कोई कार्य 30 दिनों के लिए इस शर्त पर दिया गया था कि यदि वह कार्य के लिए उपस्थित रहता है तो उसे वेतन के रूप में प्रतिदिन के ₹ 10 प्राप्त होंगे और यदि वह किसी दिन अनुपस्थित रहता है तो उसे दण्ड के रूप में उस दिन के लिए ₹ 2 का भुगतान करना पड़ेगा। अंततः उसे ₹ 216 प्राप्त हुए। वह कितने दिन अनुपस्थित रहा था ?

- (1) 9
- (2) 7
- (3) 12
- (4) 11

Options :

112507113989:1
112507113990:1
112507113991:3
112507113992:4

Question Number : 163 Question Id : 11280729745 Question Type : MCQ Option Shuffling : No Is Question Mandatory : No Calculator : None
Response Time : N.A Think Time : N.A Minimum Instruction Time : 0

Correct Marks : 5 Wrong Marks : 1

Question Key Details :

Key	Value
Comprehension	MCQ

একজন মানুষকে 30 দিনকভাবে এটা কাম দিয়া হৈছে য'ত চ'র্ত আছে যে তেওঁ দিনত 10 টকাইক হাজিলা পাব যদি সি কাম কৰিব আছে আৰু বিদিনা নাহে সি দৈনিক 2 টকাকৈ জাবিমা আদাৰা দিব লাগিব। অৱশেষত সি 216 টকা পালে। তেতিয়া হ'লে সি কিমান দিনৰ বাবে অনুপস্থিত আছিল ?

- (1) 9
- (2) 7
- (3) 12
- (4) 11

Options :

- 112807118989 1
- 112807118990 2
- 112807118991 3
- 112807118992 4

Question Number : 263 Question Id : 21280729748 Question Type : MCQ Option Shuffling : No Is Question Mandatory : No Calculator : None Response Time : N.A Think Time : N.A Minimum Instruction Time : 0

Correct Marks : 5 Wrong Marks : 1

Question Key Details :

Key	Value
Comprehension	MCQ

একজন শ্ৰমিককে 30 দিনেৰ কাজেৰ বৰাত দেওয়া হল এই শৰ্তে যে সে যদি কাজে যোগদান কৰে তাহলে সেইদিনেৰ জন্য 10 টকা পাৰিশ্ৰমিক দেওয়া হবে এবং যদি সে অনুপস্থিত থাকে তাহলে সেইদিনেৰ জন্য তাকে 2 টকা ক্ষতিপূরণ দিতে হবে। শেষপৰ্যন্ত সে 216 টকা পেল, তাহলে সে কতদিন অনুপস্থিত ছিল ?

- (1) 9
- (2) 7
- (3) 12
- (4) 11

Options :

- 112807118989 1
- 112807118990 2
- 112807118991 3
- 112807118992 4

Question Number : 263 Question Id : 21280729748 Question Type : MCQ Option Shuffling : No Is Question Mandatory : No Calculator : None Response Time : N.A Think Time : N.A Minimum Instruction Time : 0

Correct Marks : 5 Wrong Marks : 1

Question Key Details :

Key	Value
Comprehension	MCQ

એક માણસને 30 દિવસો માટે કામ એ શરતે કામવધવામાં આવ્યું હતું કે તેને ગેરહાજરી 10 રૂપિયા વેતન તરીકે મળશે. એ તે કામ બંધ કરે અને તે ગેરહાજરી રહે તો તેણે દિવસના દરેક તરીકે 2 રૂપિયા ચૂકવવા પડશે. આખરે તેને 216 રૂપિયા મળ્યા. તે કેટલા દિવસથી ગેરહાજરી છે?

- (1) 9
- (2) 7
- (3) 12
- (4) 11

Options :

- 112807118989 1
- 112807118990 2
- 112807118991 3

212807118992_4

Question Number : 263 Question Id : 21280719748 Question Type : MCQ Option Shuffling : No Is Question Mandatory : No Calculator : None
Response Time : N.A Think Time : N.A Minimum Instruction Time : 0

Correct Marks : 5 Wrong Marks : 1

Question Key Details :

Key	Value
Comprehension	MCQ

ಒಬ್ಬ ವ್ಯಕ್ತಿಗೆ ಕೆಲಸಕ್ಕೆ ಹಾಜರಾದರೆ ವೇತನವಾಗಿ ಪ್ರತಿ ದಿನ ₹ 10 ಪಡೆಯುವ ಮತ್ತು ಅವನು ಕೆಲಸಕ್ಕೆ ಗೈರಾದರೆ ಪ್ರತಿ ದಿನ ₹ 2 ಪನಾಲ್ಕು ನಿರಾಕರಣೆ ನಿಬಂಧನೆಯೊಂದಿಗೆ 30 ದಿನಗಳಿಗೆ ಕೆಲಸವನ್ನು ಹಂಚಲಾಯಿತು. ಅಂತಿಮವಾಗಿ ಅವನು ₹ 216 ಪಡೆದುಕೊಂಡ, ಅವನು ಎಷ್ಟು ದಿನಗಳು ಗೈರು ಹಾಜರಾಗಿರುತ್ತಾನೆ ?

- (1) 9
- (2) 7
- (3) 12
- (4) 11

Options :

212807118989_1

212807118990_2

212807118991_3

212807118992_4

Question Number : 263 Question Id : 21280719748 Question Type : MCQ Option Shuffling : No Is Question Mandatory : No Calculator : None
Response Time : N.A Think Time : N.A Minimum Instruction Time : 0

Correct Marks : 5 Wrong Marks : 1

Question Key Details :

Key	Value
Comprehension	MCQ

एका व्यक्तीला 30 दिवसांसाठी एका कामावर नेमण्यात आले. कामावर उपस्थित राहिल्यास एका दिवसाचे ₹ 10 देण्यात येतील व अनुपस्थित राहिल्यास ₹ 2 प्रतिदिन दंड भरावा लागेल अशी त्याला अट घालण्यात आली. अंतिमतः त्याला ₹ 216 मिळाले. तो कामगार किती दिवस अनुपस्थित राहिला ?

- (1) 9
- (2) 7
- (3) 12
- (4) 11

Options :

212807118989_1

212807118990_2

212807118991_3

212807118992_4

Question Number : 263 Question Id : 21280719748 Question Type : MCQ Option Shuffling : No Is Question Mandatory : No Calculator : None
Response Time : N.A Think Time : N.A Minimum Instruction Time : 0

Correct Marks : 5 Wrong Marks : 1

Question Key Details :

Key	Value
Comprehension	MCQ

212507118990.1
212507118991.3
212507118992.4

Question Number : 263 Question Id : 21250729748 Question Type : MCQ Option Shuffling : No Is Question Mandatory : No Calculator : None
Response Time : N.A Think Time : N.A Minimum Instruction Time : 0

Correct Marks : 5 Wrong Marks : 1

Question Key Details :

Key	Value
Comprehension	MCQ

ஒரு நபர் வேலைக்கு வந்தால் ஒரு நாளைக்கு ₹ 10 ஊதியமாக கிடைக்கும் என்றும், அவர் பணிக்கு வராவிட்டால் அந்த நாளுக்கான அபராதமாக ₹ 2 செலுத்த வேண்டும் என்ற நிபந்தனையின் பேரில் ஒரு நபருக்கு 30 நாட்களுக்கு வேலை ஒதுக்கப்பட்டது. இறுதியில் அவருக்கு ₹ 216 கிடைத்தது. எத்தனை நாட்கள் அவர் வராமல் இருந்தார்?

- (1) 9
- (2) 7
- (3) 12
- (4) 11

Options :
212507118989.1
212507118990.1
212507118991.3
212507118992.4

Question Number : 263 Question Id : 21250729748 Question Type : MCQ Option Shuffling : No Is Question Mandatory : No Calculator : None
Response Time : N.A Think Time : N.A Minimum Instruction Time : 0

Correct Marks : 5 Wrong Marks : 1

Question Key Details :

Key	Value
Comprehension	MCQ

மனிதர் ஹாஸ்டலில் ரூபாய் Rs. 10 வீதம் மலியும் ஹாஸ்டலில் யெடல ரூபாய் Rs. 2 மட்டுமே (Penalty) செலவு செய்து 30 ரூபாய் மலியும் அளித்தார். மொத்தம் தனது Rs. 216 வசூல் அளவு என்ன ரூபாய் ஹாஸ்டலில் கட்டினார் ?

- (1) 9
- (2) 7
- (3) 12
- (4) 11

Options :
212507118989.1
212507118990.1
212507118991.3
212507118992.4

Question Number : 263 Question Id : 21250729748 Question Type : MCQ Option Shuffling : No Is Question Mandatory : No Calculator : None
Response Time : N.A Think Time : N.A Minimum Instruction Time : 0

Correct Marks : 5 Wrong Marks : 1

Question Key Details :

Key	Value
Comprehension	MCQ

ایک شخص کو 30 دن کے لیے اس شرط پر کام دیا گیا کہ وہ بلور مزدوری روزانہ 10 روپے پائے گا۔ اب اگر وہ کام کی شکایت کرتا ہے اور غیر حاضر رہتا ہے تو اسے بلور جرمانہ 2 روپے اس دن کے دینے ہوں گے ہر آخر اس نے 216 روپے، تو کتنے دنوں تک وہ غیر حاضر رہا؟

9 (1)

7 (2)

12 (3)

11 (4)

Options :

212907118989 1

212807118990 2

212507118991 3

212907118992 4

Question Number : 264 Question Id : 21280719749 Question Type : MCQ Option Shuffling : No Is Question Mandatory : No Calculator : None
Response Time : N.A Think Time : N.A Minimum Instruction Time : 0

Correct Marks : 5 Wrong Marks : 1

Question Key Details :

Key	Value
Comprehension	MCQ

A ladder of length 30 m is leaning against a wall making an angle of 30° with the horizontal. Find the distance between the foot of the ladder and the wall.

(1) $14\sqrt{3}$ m

(2) $15\sqrt{3}$ m

(3) $16\sqrt{3}$ m

(4) $17\sqrt{3}$ m

Options :

212507118993 1

212807118994 2

212807118995 3

212907118996 4

Question Number : 264 Question Id : 21280719749 Question Type : MCQ Option Shuffling : No Is Question Mandatory : No Calculator : None
Response Time : N.A Think Time : N.A Minimum Instruction Time : 0

Correct Marks : 5 Wrong Marks : 1

Question Key Details :

Key	Value
Comprehension	MCQ

30 मीटर लम्बी एक सीढ़ी भ्रमल के साथ 30° का कोण बनाते हुए दीवार के साथ खड़ी है। इस सीढ़ी के निचले सिरे और दीवार के बीच दूरी क्या है?

(1) $14\sqrt{3}$ मीटर

(2) $15\sqrt{3}$ मीटर

(3) $16\sqrt{3}$ मीटर

(4) $17\sqrt{3}$ मीटर

Options :

212807118993 1

212807118994 2

212807118995 3

212807118996 4

Question Number : 264 Question Id : 21280729749 Question Type : MCQ Option Shuffling : No Is Question Mandatory : No Calculator : None
Response Time : N.A Think Time : N.A Minimum Instruction Time : 0

Correct Marks : 5 Wrong Marks : 1

Question Key Details :

Key	Value
Comprehension	MCQ

30 m দৈর্ঘ্যের এডাল জখলা বেবল ঠপবত হেলান সি অনুভূমিকার হৈছে 30° কোণ কৰি থাকে। জখলাৰ ভৰি আৰু বেবল মাজৰ দূৰত্ব কিমান হ'ব ?

(1) $14\sqrt{3}$ m

(2) $15\sqrt{3}$ m

(3) $16\sqrt{3}$ m

(4) $17\sqrt{3}$ m

Options :

212807118993 1

212807118994 2

212807118995 3

212807118996 4

Question Number : 264 Question Id : 21280729749 Question Type : MCQ Option Shuffling : No Is Question Mandatory : No Calculator : None
Response Time : N.A Think Time : N.A Minimum Instruction Time : 0

Correct Marks : 5 Wrong Marks : 1

Question Key Details :

Key	Value
Comprehension	MCQ

30 m বিশিষ্ট একটা মই সমতলের সাথে 30° কোণ করে দেওয়ালের সাথে হেলানো আছে। মই-এর গোড়া থেকে দেওয়ালের দূৰত্ব নির্ণয় কৰো।

(1) $14\sqrt{3}$ m

(2) $15\sqrt{3}$ m

(3) $16\sqrt{3}$ m

(4) $17\sqrt{3}$ m

Options :

212807118993 1

212807118994 2

212807118995 3

212807118996 4

Question Number : 264 Question Id : 21280729749 Question Type : MCQ Option Shuffling : No Is Question Mandatory : No Calculator : None
Response Time : N.A Think Time : N.A Minimum Instruction Time : 0

Correct Marks : 5 Wrong Marks : 1

Question Key Details :

Key	Value
Comprehension	MCQ

30 m લંબાઈની એક સીડી દિવાલ સામે ઝૂકી રહી છે જે આડી રહી ને 30° નો ખૂણો બનાવે છે. સીડીના પગ (છેડો) અને દિવાલ વચ્ચેનું અંતર શોધો.

- (1) $14\sqrt{3}$ m
- (2) $15\sqrt{3}$ m
- (3) $16\sqrt{3}$ m
- (4) $17\sqrt{3}$ m

Options :

212807118993 1

212807118994 2

212807118995 3

212807118996 4

Question Number : 264 Question Id : 21280719749 Question Type : MCQ Option Shuffling : No Is Question Mandatory : No Calculator : None Response Time : N.A Think Time : N.A Minimum Instruction Time : 0

Correct Marks : 5 Wrong Marks : 1

Question Key Details :

Key	Value
Comprehension	MCQ

30 cm લાંબાઈની એક સીડી દિવાલ સામે ઝૂકી રહી છે જે આડી રહી ને 30° નો ખૂણો બનાવે છે. સીડીના પગ (છેડો) અને દિવાલ વચ્ચેનું અંતર શોધો.

- (1) $14\sqrt{3}$ m
- (2) $15\sqrt{3}$ m
- (3) $16\sqrt{3}$ m
- (4) $17\sqrt{3}$ m

Options :

212807118993 1

212807118994 2

212807118995 3

212807118996 4

Question Number : 164 Question Id : 21280719749 Question Type : MCQ Option Shuffling : No Is Question Mandatory : No Calculator : None Response Time : N.A Think Time : N.A Minimum Instruction Time : 0

Correct Marks : 5 Wrong Marks : 1

Question Key Details :

Key	Value
Comprehension	MCQ

30 મી. લાંબાઈનો એક સીડી દિવાલ સામે ઝૂકી રહી છે જે આડી રહી ને 30° નો ખૂણો બનાવે છે. સીડીના પગ (છેડો) અને દિવાલ વચ્ચેનું અંતર શોધો.

- (1) $14\sqrt{3}$ m
- (2) $15\sqrt{3}$ m
- (3) $16\sqrt{3}$ m
- (4) $17\sqrt{3}$ m

Options :

212807118993 1

212807118994 1
212807118995 3
212807118996 4

Question Number : 264 Question Id : 21280729749 Question Type : MCQ Option Shuffling : No Is Question Mandatory : No Calculator : None
Response Time : N.A Think Time : N.A Minimum Instruction Time : 0

Correct Marks : 5 Wrong Marks : 1

Question Key Details :

Key	Value
Comprehension	MCQ

30 മീറ്റർ നീളമുള്ള ഒരു ഏണി ഒരു ഭിത്തിയിൽ ചാരി വെച്ചപ്പോൾ, രൂപപ്പെടുന്ന കോണിന്റെ അളവ് 30° ആണെങ്കിൽ, ഏണിയുടെ കാലുകൾ ഭിത്തിയും തമ്മിലുള്ള ദൂരം എത്ര ?

- (1) $14\sqrt{3}$ m
- (2) $15\sqrt{3}$ m
- (3) $16\sqrt{3}$ m
- (4) $17\sqrt{3}$ m

Options :

212807118993 1
212807118994 3
212807118995 3
212807118996 4

Question Number : 264 Question Id : 21280729749 Question Type : MCQ Option Shuffling : No Is Question Mandatory : No Calculator : None
Response Time : N.A Think Time : N.A Minimum Instruction Time : 0

Correct Marks : 5 Wrong Marks : 1

Question Key Details :

Key	Value
Comprehension	MCQ

ഒരു ട്രൈയാംഗിളിന്റെ ഒരു കോണിന്റെ അളവ് 30° ആണെങ്കിൽ, അതിന്റെ മറ്റൊരു കോണിന്റെ അളവ് എത്ര ?

- (1) $14\sqrt{3}$ മീറ്റർ
- (2) $15\sqrt{3}$ മീറ്റർ
- (3) $16\sqrt{3}$ മീറ്റർ
- (4) $17\sqrt{3}$ മീറ്റർ

Options :

212807118993 1
212807118994 3
212807118995 3
212807118996 4

Question Number : 264 Question Id : 21280729749 Question Type : MCQ Option Shuffling : No Is Question Mandatory : No Calculator : None
Response Time : N.A Think Time : N.A Minimum Instruction Time : 0

Correct Marks : 5 Wrong Marks : 1

Question Key Details :

Key	Value
Comprehension	MCQ

30 ਮੀਟਰ ਲੰਬਾਈ ਦੀ ਇਕ ਪੇਂਡੀ ਇਕ ਕੰਧ ਦੇ ਨਾਲ ਝੁੱਕੀ ਹੋਈ ਹੈ ਜੋ ਕਿ ਲੈਟਵੇਂ ਦੇ ਨਾਲ ਇਕ ਕੋਣ 30° ਬਣਾਉਂਦਾ ਹੈ। ਪੇਂਡੀ ਦੇ ਪੈਰ ਤੇ ਕੰਧ ਵਿਚਕਾਰ ਦੂਰੀ ਲੱਭੋ ।

- (1) $14\sqrt{3}$ ਮੀਟਰ
- (2) $15\sqrt{3}$ ਮੀਟਰ
- (3) $16\sqrt{3}$ ਮੀਟਰ
- (4) $17\sqrt{3}$ ਮੀਟਰ

Options :

212807118993 1

212807118994 2

212807118995 3

212807118996 4

Question Number : 264 Question Id : 21280729749 Question Type : MCQ Option Shuffling : No Is Question Mandatory : No Calculator : None
Response Time : N.A Think Time : N.A Minimum Instruction Time : 0

Correct Marks : 5 Wrong Marks : 1

Question Key Details :

Key	Value
Comprehension	MCQ

30 ਮੀਟਰ ਲੰਬਾਈ ਵਾਲੀ ਇੱਕ ਪੇਂਡੀ ਇੱਕ ਕੰਧ ਦੇ ਨਾਲ ਝੁੱਕੀ ਹੋਈ ਹੈ ਜੋ ਕਿ ਲੈਟਵੇਂ ਦੇ ਨਾਲ ਇੱਕ ਕੋਣ 30° ਬਣਾਉਂਦਾ ਹੈ। ਪੇਂਡੀ ਦੇ ਪੈਰ ਤੇ ਕੰਧ ਵਿਚਕਾਰ ਦੂਰੀ ਲੱਭੋ ।

- (1) $14\sqrt{3}$ m
- (2) $15\sqrt{3}$ m
- (3) $16\sqrt{3}$ m
- (4) $17\sqrt{3}$ m

Options :

212807118993 1

212807118994 2

212807118995 3

212807118996 4

Question Number : 264 Question Id : 21280729749 Question Type : MCQ Option Shuffling : No Is Question Mandatory : No Calculator : None
Response Time : N.A Think Time : N.A Minimum Instruction Time : 0

Correct Marks : 5 Wrong Marks : 1

Question Key Details :

Key	Value
Comprehension	MCQ

ఒక 30 m పొడవుగల నిచ్చిన క్షితికానికి 30° కోణం చేస్తూ గోడపై వాలించి, ఆ నిచ్చిన పొడం మరియు గోడ మధ్య దూరం :

- (1) $14\sqrt{3}$ m
- (2) $15\sqrt{3}$ m
- (3) $16\sqrt{3}$ m
- (4) $17\sqrt{3}$ m

Options :

- 212807118993 1
- 212807118994 2
- 212807118995 3
- 212807118996 4

Question Number : 264 Question Id : 21280719749 Question Type : MCQ Option Shuffling : No Is Question Mandatory : No Calculator : None Response Time : N.A Think Time : N.A Minimum Instruction Time : 0

Correct Marks : 5 Wrong Marks : 1

Question Key Details :

Key	Value
Comprehension	MCQ

ایک 30 میٹر لمبی سیدھی افق میں 30° زاویہ بناتی ہوئی ایک دیوار کے مقابلے تک رہی ہے۔ تو دیوار اور سیدھی کے نچلے حصے کے بیچ کی دیوار تپائش :

- m $14\sqrt{3}$ (1)
- m $15\sqrt{3}$ (2)
- m $16\sqrt{3}$ (3)
- m $17\sqrt{3}$ (4)

Options :

- 212807118993 1
- 212807118994 2
- 212807118995 3
- 212807118996 4

Question Number : 165 Question Id : 21280719750 Question Type : MCQ Option Shuffling : No Is Question Mandatory : No Calculator : None Response Time : N.A Think Time : N.A Minimum Instruction Time : 0

Correct Marks : 5 Wrong Marks : 1

Question Key Details :

Key	Value
Comprehension	MCQ

A 10 m long, 4 m high and 24 cm thick wall is to be built using bricks having dimensions 25 cm × 12 cm × 8 cm. Number of bricks required is :

- (1) 4160
- (2) 4000
- (3) 4200
- (4) 4170

Options :

- 212807118997 1
- 212807118998 2
- 212807118999 3

212507119000.4

Question Number : 265 Question Id : 21250729750 Question Type : MCQ Option Shuffling : No Is Question Mandatory : No Calculator : None
Response Time : N.A Think Time : N.A Minimum Instruction Time : 0

Correct Marks : 5 Wrong Marks : 1

Question Key Details :

Key	Value
Comprehension	MCQ

एक 10 मीटर लंबी, 4 मीटर ऊंची और 24 सेंमी मोटी दीवार बनाई जानी है जिसके लिए 25 सेंमी \times 12 सेंमी \times 8 सेंमी विमाओं वाली ईंट प्रयोग की जानी हैं। इसके लिए कितनी ईंटों की आवश्यकता होगी ?

- (1) 4160
- (2) 4000
- (3) 4200
- (4) 4170

Options :

212507118997.1

212507118998.1

212507118999.3

212507119000.4

Question Number : 265 Question Id : 21250729750 Question Type : MCQ Option Shuffling : No Is Question Mandatory : No Calculator : None
Response Time : N.A Think Time : N.A Minimum Instruction Time : 0

Correct Marks : 5 Wrong Marks : 1

Question Key Details :

Key	Value
Comprehension	MCQ

25 cm \times 12 cm \times 8 cm জোখৰ ইটা ব্যৱহাৰ কৰি এখন 10 m দীঘল, 4 m উচ্চতাৰ আৰু 24 cm ডাঠ এখন বেৰ বনোৱা হৈছে। কিমানটা ইটা ব্যৱহাৰ হৈছে কোৱা ?

- (1) 4160
- (2) 4000
- (3) 4200
- (4) 4170

Options :

212507118997.1

212507118998.1

212507118999.3

212507119000.4

Question Number : 265 Question Id : 21250729750 Question Type : MCQ Option Shuffling : No Is Question Mandatory : No Calculator : None
Response Time : N.A Think Time : N.A Minimum Instruction Time : 0

Correct Marks : 5 Wrong Marks : 1

Question Key Details :

Key	Value
Comprehension	MCQ

25 cm \times 12 cm \times 8 cm মাত্রা বিশিষ্ট ইট দিয়ে একটি 10 m দীর্ঘ, 4 m উচ্চতা এবং 24 cm পুরু দেওয়াল তৈরি করা হবে। প্রয়োজনীয় ইটের সংখ্যা হল—

- (1) 4160
- (2) 4000
- (3) 4200
- (4) 4170

Options :

- 212807118997 1
212807118998 2
212807118999 3
212807119000 4

Question Number : 265 Question Id : 21280729750 Question Type : MCQ Option Shuffling : No Is Question Mandatory : No Calculator : None
Response Time : N.A Think Time : N.A Minimum Instruction Time : 0

Correct Marks : 5 Wrong Marks : 1

Question Key Details :

Key	Value
Comprehension	MCQ

25 cm × 12 cm × 8 cm परिमाण त्र घनखती कडे नो डिपयोग करीने 10 m लांबी, 4 m रीची अने 24 cm बडी दिवाल बांधवामां आपी. बडरी कडेनी संख्या शोधो.

- (1) 4160
(2) 4167
(3) 4200
(4) 4170

Options :

- 212807118997 1
212807118998 2
212807118999 3
212807119000 4

Question Number : 265 Question Id : 21280729750 Question Type : MCQ Option Shuffling : No Is Question Mandatory : No Calculator : None
Response Time : N.A Think Time : N.A Minimum Instruction Time : 0

Correct Marks : 5 Wrong Marks : 1

Question Key Details :

Key	Value
Comprehension	MCQ

10 मीटर लांबी, 4 मी मरुतु 24 सेमी बडदी गेणकेयसु 24 सेमी × 12 सेमी × 8 सेमी म्खुरेणकेयसु बांधवामां आपी. बडरी कडेनी संख्या शोधो.

- (1) 4160
(2) 4000
(3) 4200
(4) 4170

Options :

- 212807118997 1
212807118998 2
212807118999 3
212807119000 4

Question Number : 265 Question Id : 21280729750 Question Type : MCQ Option Shuffling : No Is Question Mandatory : No Calculator : None
Response Time : N.A Think Time : N.A Minimum Instruction Time : 0

Correct Marks : 5 Wrong Marks : 1

Question Key Details :

Key	Value
Comprehension	MCQ

25 सेमी × 12 सेमी × 8 सेमी परिमाण असणाऱ्या विटेचा वापर करून एक 10 मी. लांब, 4 मी. डंच आणि 24 सेमी जाडीची भिंत उभारण्याची आहे. ही भिंत उभारण्यास किती विटा लागतील ?

- (1) 4160
(2) 4000
(3) 4200
(4) 4170

Options :

- 212807118997 1
212807118998 2
212807118999 3
212807119000 4

Question Number : 265 Question Id : 21280719750 Question Type : MCQ Option Shuffling : No Is Question Mandatory : No Calculator : None
Response Time : N.A Think Time : N.A Minimum Instruction Time : 0
Correct Marks : 5 Wrong Marks : 1

Question Key Details :

Key	Value
Comprehension	MCQ

25 cm × 12 cm × 8 cm आकाराच्या विटा कडून एक भिंत 10 मी. लांब, 4 मी. डंच आणि 24 सेमी जाडीची उभारण्याची आहे. ही भिंत उभारण्यास किती विटा लागतील ?

- (1) 4160
(2) 4000
(3) 4200
(4) 4170

Options :

- 212807118997 1
212807118998 2
212807118999 3
212807119000 4

Question Number : 265 Question Id : 21280719750 Question Type : MCQ Option Shuffling : No Is Question Mandatory : No Calculator : None
Response Time : N.A Think Time : N.A Minimum Instruction Time : 0
Correct Marks : 5 Wrong Marks : 1

Question Key Details :

Key	Value
Comprehension	MCQ

आकाराच्या 25 सेमी. × 12 सेमी. × 8 सेमी. विटा कडून एक भिंत 10 मी. लांब, 4 मी. डंच आणि 24 सेमी जाडीची उभारण्याची आहे. ही भिंत उभारण्यास किती विटा लागतील ?

- (1) 4160
(2) 4000
(3) 4200
(4) 4170

Options :

- 212807118997 1
212807118998 2
212807118999 3
212807119000 4

Question Number : 265 Question Id : 21280719750 Question Type : MCQ Option Shuffling : No Is Question Mandatory : No Calculator : None
Response Time : N.A Think Time : N.A Minimum Instruction Time : 0

Correct Marks : 5 Wrong Marks : 1

Question Key Details :

Key	Value
Comprehension	NEQ

10 ਮੀਟਰ ਲੰਬੀ, 4 ਮੀਟਰ ਅਤੇ 24 ਸੈਂਟੀਮੀਟਰ ਮੋਟੀ ਕੰਧ ਨੂੰ 24 ਸੈਂਟੀਮੀਟਰ \times 12 ਸੈਂਟੀਮੀਟਰ \times 8 ਸੈਂਟੀਮੀਟਰ ਪਰਿਮਾਣ ਵਾਲੀਆਂ ਇੱਟਾਂ ਦੀ ਵਰਤੋਂ ਕਰਕੇ ਬਣਾਇਆ ਜਾਂਦਾ ਹੈ। ਕਿੰਨੀਆਂ ਇੱਟਾਂ ਦੀ ਲੋੜ ਹੈ _____ ।

- (1) 4160
- (2) 4167
- (3) 4200
- (4) 4170

Options :

212807118997 1

212807118998 2

212807118999 3

212807119000 4

Question Number : 265 Question Id : 21280719750 Question Type : MCQ Option Shuffling : No Is Question Mandatory : No Calculator : None Response Time : N.A Think Time : N.A Minimum Instruction Time : 0

Correct Marks : 5 Wrong Marks : 1

Question Key Details :

Key	Value
Comprehension	NEQ

10 ਮੀਟਰ ਲੰਬੀ, 4 ਮੀਟਰ ਚੌੜਾਈ, 24 ਸੈਂਟੀਮੀਟਰ ਮੋਟੀ ਕੰਧ ਨੂੰ 24 ਸੈਂਟੀਮੀਟਰ \times 12 ਸੈਂਟੀਮੀਟਰ \times 8 ਸੈਂਟੀਮੀਟਰ ਪਰਿਮਾਣ ਵਾਲੀਆਂ ਇੱਟਾਂ ਦੀ ਵਰਤੋਂ ਕਰਕੇ ਬਣਾਇਆ ਜਾਂਦਾ ਹੈ। ਕਿੰਨੀਆਂ ਇੱਟਾਂ ਦੀ ਲੋੜ ਹੈ _____ ।

- (1) 4160
- (2) 4000
- (3) 4200
- (4) 4170

Options :

212807118997 1

212807118998 2

212807118999 3

212807119000 4

Question Number : 265 Question Id : 21280719750 Question Type : MCQ Option Shuffling : No Is Question Mandatory : No Calculator : None Response Time : N.A Think Time : N.A Minimum Instruction Time : 0

Correct Marks : 5 Wrong Marks : 1

Question Key Details :

Key	Value
Comprehension	NEQ

25 cm \times 12 cm \times 8 cm ਕੋਲਰਲ ਗਲ ਭਰੂਣਾਂ ਨੂੰ 10 ਮੀਟਰ ਪੈਦਾ, 4 m ਚੌੜਾਈ ਅਤੇ ਮੋਟਾਈ 24 cm ਮੋਟਾਈ ਗਲ ਨੂੰ ਭਰਨ ਲਈ ਕਿੰਨੀ ਭਰੂਣਾਂ ਦੀ ਲੋੜ ਹੈ ?

- (1) 4160
- (2) 4000
- (3) 4200
- (4) 4170

Options :

212807118997.1
212807118998.2
212807118999.3
212807119000.4

Question Number : 265 Question Id : 21280719750 Question Type : MCQ Option Shuffling : No Is Question Mandatory : No Calculator : None
Response Time : N.A Think Time : N.A Minimum Instruction Time : 0

Correct Marks : 5 Wrong Marks : 1

Question Key Details :

Key	Value
Comprehension	MCQ

ایک 10 سینٹر لمبی، 4 سینٹر اونچی اور 24 سینٹی میٹر موٹی دیوار ان اینٹوں کے استعمال سے بنی ہے جن کی جہتیں $25 \text{ cm} \times 12 \text{ cm} \times 8 \text{ cm}$ ہیں۔ تو درکار اینٹوں کی تعداد بتائیں۔

- (1) 4160
(2) 4000
(3) 4200
(4) 4170

Options :

212807118997.1
212807118998.2
212807118999.3
212807119000.4

Question Number : 266 Question Id : 21280719751 Question Type : MCQ Option Shuffling : No Is Question Mandatory : No Calculator : None
Response Time : N.A Think Time : N.A Minimum Instruction Time : 0

Correct Marks : 5 Wrong Marks : 1

Question Key Details :

Key	Value
Comprehension	MCQ

Amit can do a task in 10 days and Bhanu can do the same task in 40 days. In how many days will the task be completed if they work together ?

- (1) 7
(2) 8
(3) 10
(4) 12

Options :

212807119001.1
212807119002.2
212807119003.3
212807119004.4

Question Number : 266 Question Id : 21280719751 Question Type : MCQ Option Shuffling : No Is Question Mandatory : No Calculator : None
Response Time : N.A Think Time : N.A Minimum Instruction Time : 0

Correct Marks : 5 Wrong Marks : 1

Question Key Details :

Key	Value
Comprehension	MCQ

अमित एक कार्य को 10 दिन में कर सकता है और भानू इसी कार्य को 40 दिन में कर सकता है। यदि ये दोनों मिलकर यह कार्य करें तो उसे कितने दिनों में पूरा कर लेंगे ?

- (1) 7
- (2) 8
- (3) 10
- (4) 12

Options :

- 212807119001 1
- 212807119002 2
- 212807119003 3
- 212807119004 4

Question Number : 266 Question Id : 21280719751 Question Type : MCQ Option Shuffling : No Is Question Mandatory : No Calculator : None
Response Time : N.A Think Time : N.A Minimum Instruction Time : 0
Correct Marks : 5 Wrong Marks : 1

Question Key Details :

Key	Value
Comprehension	MCQ

अमिते एउटा काम 10 दिनत आरु भानुवे सेई एकेई कामठो 40 दिनत करिब पावे । सिईते एकेनगे काम करिबे कामठो किमान दिनत सम्पन्न हबै ?

- (1) 7
- (2) 8
- (3) 10
- (4) 12

Options :

- 212807119001 1
- 212807119002 2
- 212807119003 3
- 212807119004 4

Question Number : 266 Question Id : 21280719751 Question Type : MCQ Option Shuffling : No Is Question Mandatory : No Calculator : None
Response Time : N.A Think Time : N.A Minimum Instruction Time : 0
Correct Marks : 5 Wrong Marks : 1

Question Key Details :

Key	Value
Comprehension	MCQ

अमित एकटा काज 10 दिने एवम् भानु सेई काज 40 दिने करबै पावै । यदि तरा एकरे काज करै ताहले कत दिने काजटि शेष हबै ?

- (1) 7
- (2) 8
- (3) 10
- (4) 12

Options :

- 212807119001 1
- 212807119002 2
- 212807119003 3
- 212807119004 4

Question Number : 266 Question Id : 21280719751 Question Type : MCQ Option Shuffling : No Is Question Mandatory : No Calculator : None
Response Time : N.A Think Time : N.A Minimum Instruction Time : 0

Correct Marks : 5 Wrong Marks : 1

Question Key Details :

Key	Value
Comprehension	MCQ

અમિત 10 દિવસોમાં કાર્ય (ટાસ્ક) પૂરું કરી શકે છે અને ભાનુ તે જ કાર્ય (ટાસ્ક) 40 દિવસોમાં કરી શકે છે બંને લેઓ સાથે મળીને કામ કરશે તો તેઓ કેટલા દિવસોમાં કાર્ય કરી શકશે?

- (1) 7
- (2) 8
- (3) 10
- (4) 12

Options :

212907119001 3

212907119002 3

212907119003 3

212907119004 4

Question Number : 266 Question Id : 21280729751 Question Type : MCQ Option Shuffling : No Is Question Mandatory : No Calculator : None Response Time : N.A Think Time : N.A Minimum Instruction Time : 0

Correct Marks : 5 Wrong Marks : 1

Question Key Details :

Key	Value
Comprehension	MCQ

અમિતનો એક કાર્યોજ્ઞ 10 દિવસમાં મુક્તિ મેળવે છે અને ભાનુ તે જ કાર્યોજ્ઞ 40 દિવસમાં મુક્તિ મેળવે છે. જો તેઓ મળીને કાર્ય કરે તો તેઓ કેટલા દિવસોમાં કાર્ય કરી શકશે?

- (1) 7
- (2) 8
- (3) 10
- (4) 12

Options :

212907119001 3

212907119002 3

212907119003 3

212907119004 4

Question Number : 266 Question Id : 21280729751 Question Type : MCQ Option Shuffling : No Is Question Mandatory : No Calculator : None Response Time : N.A Think Time : N.A Minimum Instruction Time : 0

Correct Marks : 5 Wrong Marks : 1

Question Key Details :

Key	Value
Comprehension	MCQ

एक काम करण्यास अमितला 10 दिवस लागतात. तर तेच काम करण्यास भानुला 40 दिवस लागतात. जर दोघांनी एकत्र काम केले, तर ते काम किती दिवसात पूर्ण होईल ?

- (1) 7
- (2) 8
- (3) 10
- (4) 12

Options :

212907119001 3

212907119002 3

212907119003 3

212907119004 4

Options :

212807119001 : 1

212807119002 : 2

212807119003 : 3

212807119004 : 4

Question Number : 165 Question Id : 21280729751 Question Type : MCQ Option Shuffling : No Is Question Mandatory : No Calculator : None
Response Time : N.A Think Time : N.A Minimum Instruction Time : 0

Correct Marks : 5 Wrong Marks : 1

Question Key Details :

Key	Value
Comprehension	MCQ

அமித ஒரு வேலையை 10 நாட்களில் செய்ய முடியும் , பானு அதே வேலையை 40 நாட்களில் செய்ய முடியும் , அவர்கள் ஒன்றிணைந்து செயல்பட்டால் எத்தனை நாட்களில் பணி நிறைவடையும்?

(1) 7

(2) 8

(3) 10

(4) 12

Options :

212807119001 : 1

212807119002 : 2

212807119003 : 3

212807119004 : 4

Question Number : 166 Question Id : 21280729751 Question Type : MCQ Option Shuffling : No Is Question Mandatory : No Calculator : None
Response Time : N.A Think Time : N.A Minimum Instruction Time : 0

Correct Marks : 5 Wrong Marks : 1

Question Key Details :

Key	Value
Comprehension	MCQ

அமெல் 6.8 பணியை 10 ரోல்களில் முடியும் போது அடே 6.8 பணியை 40 ரோல்களில் செய்தார், வாரம் ஐந்து கமிசன் 6.8 ரோல்களில்
அ பணியை முடிவு செய்தார் ?

(1) 7

(2) 8

(3) 10

(4) 12

Options :

212807119001 : 1

212807119002 : 2

212807119003 : 3

212807119004 : 4

Question Number : 166 Question Id : 21280729751 Question Type : MCQ Option Shuffling : No Is Question Mandatory : No Calculator : None
Response Time : N.A Think Time : N.A Minimum Instruction Time : 0

Correct Marks : 5 Wrong Marks : 1

Question Key Details :

Key	Value
Comprehension	MCQ

امیت ایک کام کو 10 دن میں کر سکتا ہے اور یحنا نو بالکل وہی کام 40 دن میں کر سکتا ہے۔ اگر وہ دونوں مل کر کام کریں تو کتنے دنوں میں کام مکمل ہوگا ؟

7 (1)

8 (2)

10 (3)

12 (4)

Options :

112807119001 1

112807119002 2

112807119003 3

112807119004 4

Question Number : 267 Question Id : 21280729752 Question Type : MCQ Option Shuffling : No Is Question Mandatory : No Calculator : None
Response Time : N.A Think Time : N.A Minimum Instruction Time : 0

Correct Marks : 5 Wrong Marks : 1

Question Key Details :

Key	Value
Comprehension	MCQ

A student goes to school from his residence at a speed of $2\frac{1}{2}$ km/h and reaches school 6 minutes late. If he travels at a speed of 3 km/h, he reaches 10 minutes before time. What is the distance of his school from his residence ?

(1) 4 km

(2) $3\frac{1}{4}$ km

(3) 1 km

(4) $3\frac{1}{2}$ km

Options :

112807119001 1

112807119002 2

112807119003 3

112807119004 4

Question Number : 267 Question Id : 21280729752 Question Type : MCQ Option Shuffling : No Is Question Mandatory : No Calculator : None
Response Time : N.A Think Time : N.A Minimum Instruction Time : 0

Correct Marks : 5 Wrong Marks : 1

Question Key Details :

Key	Value
Comprehension	MCQ

एक विद्यार्थी अपने घर से $2\frac{1}{2}$ किमी/घंटा की गति से विद्यालय जाता है और विद्यालय 6 मिनट देर से पहुंचता है। यदि वह 3 किमी/घंटा की गति से जाए तो समय से 10 मिनट पहले पहुंचता है। उसके घर से विद्यालय कितना दूर है ?

- (1) 4 किमी
(2) $3\frac{1}{4}$ किमी
(3) 1 किमी
(4) $3\frac{1}{2}$ किमी

Options :

212807119005 1

212807119006 2

212807119007 3

212807119008 4

Question Number : 167 Question Id : 21280719752 Question Type : MCQ Option Shuffling : No Is Question Mandatory : No Calculator : None
Response Time : N.A Think Time : N.A Minimum Instruction Time : 0

Correct Marks : 5 Wrong Marks : 1

Question Key Details :

Key	Value
Comprehension	MCQ

এজন ছাত্ৰই ঘৰৰ পৰা $2\frac{1}{2}$ km/h বেগত বিদ্যালয়লৈ গৈ পায় আৰু লৈ পাওঁতে 6 মিনিট বেৰি হয়। যদি সি 3 km/h বেগত যায় তেন্তে সি 10 মিনিট আগতে গৈ পায়। তেওঁৰ ঘৰৰ পৰা বিদ্যালয়ৰ দূৰত্ব কিমান ?

- (1) 4 km
(2) $3\frac{1}{4}$ km
(3) 1 km
(4) $3\frac{1}{2}$ km

Options :

212807119005 1

212807119006 2

212807119007 3

212807119008 4

Question Number : 167 Question Id : 21280719752 Question Type : MCQ Option Shuffling : No Is Question Mandatory : No Calculator : None
Response Time : N.A Think Time : N.A Minimum Instruction Time : 0

Correct Marks : 5 Wrong Marks : 1

Question Key Details :

Key	Value
Comprehension	MCQ

এক পড়ুয়া তার বাড়ি থেকে $2\frac{1}{2}$ km/h গতিতে বিদ্যালয়ে যায় এবং 6 মিনিট দেরিতে বিদ্যালয়ে পৌঁছায়। যদি সে 3 km/h গতিতে যায় তাহলে সে 10 মিনিট আগে পৌঁছাবে। তার বাড়ি থেকে বিদ্যালয়ের দূরত্ব কত ?

- (1) 4 km
(2) $3\frac{1}{4}$ km
(3) 1 km
(4) $3\frac{1}{2}$ km

Options :

212807119005 3
212807119006 3
212807119007 3
212807119008 4

Question Number : 267 Question Id : 21280729752 Question Type : MCQ Option Shuffling : No Is Question Mandatory : No Calculator : None
Response Time : N.A Think Time : N.A Minimum Instruction Time : 0
Correct Marks : 5 Wrong Marks : 1

Question Key Details :

Key	Value
Comprehension	MCQ

$2\frac{1}{2}$ km/h ની ઝડપે એક વિદ્યાર્થી પોતાના ઘર થી શાળાએ જાય છે અને શાળાએ 6 મિનિટ મોડો પહોંચે છે. જો તે 3 km/h ની ઝડપે સડર કરે તો તે 10 મિનિટ વહેલો પહોંચે છે. તો તેના ઘરથી શાળાનું અંતર શું છે?

- (1) 4 km
(2) $3\frac{1}{4}$ km
(3) 1 km
(4) $3\frac{1}{2}$ km

Options :

212807119005 3
212807119006 3
212807119007 3
212807119008 4

Question Number : 267 Question Id : 21280729752 Question Type : MCQ Option Shuffling : No Is Question Mandatory : No Calculator : None
Response Time : N.A Think Time : N.A Minimum Instruction Time : 0
Correct Marks : 5 Wrong Marks : 1

Question Key Details :

Key	Value
Comprehension	MCQ

ಒಬ್ಬ ವಿದ್ಯಾರ್ಥಿಯು ತನ್ನ ಮನೆಯಿಂದ $2\frac{1}{2}$ km/h ವೇಗದಲ್ಲಿ ಶಾಲೆಗೆ ಹೋಗುವನು ಮತ್ತು ಶಾಲೆಯನ್ನು 6 ನಿಮಿಷಗಳು ತಡವಾಗಿ ತಲುಪುತ್ತಾನೆ. ಅವನು 3 km/h ವೇಗದಲ್ಲಿ ಕ್ರಮಿಸಿದರೆ ಸುಲಭವಾಗಿ 10 ನಿಮಿಷದಲ್ಲಿ ತಲುಪಬಹುದು. ಹಾಗಿದ್ದರೆ ಅವನ ಶಾಲೆಯು ಅವನ ಮನೆಯಿಂದ ಎಷ್ಟು ದೂರದಲ್ಲಿದೆ ?

- (1) 4 km
 (2) $3\frac{1}{4}$ km
 (3) 1 km
 (4) $3\frac{1}{2}$ km

Options :

212807119005 1
 212807119006 2
 212807119007 3
 212807119008 4

Question Number : 267 Question Id : 21280719752 Question Type : MCQ Option Shuffling : No Is Question Mandatory : No Calculator : None

Response Time : N.A Think Time : N.A Minimum Instruction Time : 0

Correct Marks : 5 Wrong Marks : 1

Question Key Details :

Key	Value
Comprehension	MCQ

एका विद्यार्थ्याला $2\frac{1}{2}$ किमी/तास इतक्या वेगाने आपल्या घरापासून शाळेत जाण्यास 6 मिनीटे ढशीर होती. जर त्याने 3 किमी/तास इतक्या वेगाने प्रवास केला तर तो वेळेच्या 10 मिनीटे आधी शाळेत पोहोचतो. त्याच्या घरापासून शाळा किती अंतरावर आहे ?

- (1) 4 किमी
 (2) $3\frac{1}{4}$ किमी
 (3) 1 किमी
 (4) $3\frac{1}{2}$ किमी

Options :

212807119005 1
 212807119006 2
 212807119007 3
 212807119008 4

Question Number : 267 Question Id : 21280719752 Question Type : MCQ Option Shuffling : No Is Question Mandatory : No Calculator : None

Response Time : N.A Think Time : N.A Minimum Instruction Time : 0

Correct Marks : 5 Wrong Marks : 1

Question Key Details :

Key	Value
Comprehension	MCQ

ഒരു വിദ്യാർത്ഥി അവന്റെ വീട്ടിൽ നിന്നും സ്കൂളിലേക്ക് മണിക്കൂറിൽ $2\frac{1}{2}$ കി. മീ വേഗതയിൽ പോയാൽ 6 മിനിറ്റ് വൈകി സ്കൂളിൽ എത്തും. അവൻ മണിക്കൂറിൽ 3 കി. മീ. വേഗതയിൽ പോയാൽ 10 മിനിറ്റ് നേരമത്ത സ്കൂളിൽ എത്തുമെങ്കിൽ, സ്കൂളും വീടും തമ്മിലുള്ള ദൂരം എത്ര ?

- (1) 4 km
- (2) $3\frac{1}{4}$ km
- (3) 1 km
- (4) $3\frac{1}{2}$ km

Options :

- 212807119003 1
- 212807119004 1
- 212807119005 3
- 212807119006 4

Question Number : 257 Question Id : 21280729752 Question Type : MCQ Option Shuffling : No Is Question Mandatory : No Calculator : None Response Time : N.A Think Time : N.A Minimum Instruction Time : 0 Correct Marks : 5 Wrong Marks : 1

Question Key Details :

Key	Value
Comprehension	MCQ

ബാലിഷ് ബാഗ് ൭ മൂർ തിയാമെടു $2\frac{1}{2}$ രൂപ./വഴി രേഖക്കു മിവാ രു/൭ 6 നിറീര തിയാമെ വെച്ചിനു । മേ മറ്റു 3 രൂപ./വഴി രേഖക്കു മിവാ, മേ 1൦ നിറീര മൂർമൂ വെച്ചേ । ൭ മൂർ ൭'൭ തിയാമെനു മൂ൭൭ മേനു ?

- (1) 4 രൂപ.
- (2) $3\frac{1}{4}$ രൂപ.
- (3) 1 രൂപ.
- (4) $3\frac{1}{2}$ രൂപ.

Options :

- 212807119003 1
- 212807119004 1
- 212807119005 3
- 212807119006 4

Question Number : 267 Question Id : 21280729752 Question Type : MCQ Option Shuffling : No Is Question Mandatory : No Calculator : None Response Time : N.A Think Time : N.A Minimum Instruction Time : 0 Correct Marks : 5 Wrong Marks : 1

Question Key Details :

Key	Value
Comprehension	MCQ

ਇਕ ਬੱਚਾ ਆਪਣੇ ਘਰ ਤੋਂ ਸਕੂਲ $2\frac{1}{2}$ ਕਿਲੋਮੀਟਰ/ਪ੍ਰਤੀ ਘੰਟਾ ਦੀ ਰਫਤਾਰ ਨਾਲ ਜਾਂਦਾ ਹੈ ਅਤੇ 6 ਮਿੰਟ ਲੇਟ ਪਹੁੰਚਦਾ ਹੈ ਅਗਰ ਉਹ 3 ਕਿਲੋਮੀਟਰ/ਪ੍ਰਤੀ ਘੰਟਾ ਦੀ ਰਫਤਾਰ ਨਾਲ ਸਫਰ ਤੈਅ ਕਰੇ ਤਾਂ ਉਹ 10 ਮਿੰਟ ਸੌਖੇ ਤਰੀਕੇ ਨਾਲ ਜਾਏਗਾ। ਦੱਸੋ ਉਸ ਦੇ ਘਰ ਤੋਂ ਸਕੂਲ ਦੀ ਦੂਰੀ ਕਿੰਨੀ ਹੈ :

- (1) 4 ਕਿਲੋਮੀਟਰ
- (2) $3\frac{1}{4}$ ਕਿਲੋਮੀਟਰ
- (3) 1 ਕਿਲੋਮੀਟਰ
- (4) $3\frac{1}{2}$ ਕਿਲੋਮੀਟਰ

Options :

212807119005 1

212807119006 2

212807119007 3

212807119008 4

Question Number : 267 Question Id : 21280719752 Question Type : MCQ Option Shuffling : No Is Question Mandatory : No Calculator : None Response Time : N.A Think Time : N.A Minimum Instruction Time : 0

Correct Marks : 5 Wrong Marks : 1

Question Key Details :

Key	Value
Comprehension	MCQ

ਓਰੁ ਮਾਠਾਨਵਠ ਠਨਾਨੁ ਵੀਂਡੀ ਲਿਰੁਨੁਠੁ ਮਠਨੀਕੁਕੁ ਕੀ .ਮੀ ਵੇਵਕਠਠੀਲ ਪਲੰਗੀਕੁਕੁਸ਼ ਸੇਨੁਨੁ $2\frac{1}{2}$ 6 ਨਿਮੀਡਠਠਕਲ ਠਾਮਠਮਾਕ ਪਲੰਗੀਠਠਠਠ ਅਠਾਡ ਕੀਰਾਠਨ . ਮਠਨੀਕੁਕੁ 3 ਕੀ.ਮੀ. ਵੇਵਕਠਠੀਲ ਪਠਠਨੀਠਠਠਾਲ , 10 ਨਿਮੀਡਠਠਕਲ ਮੁਠਨਨਠਠਾਕਵੇ ਵਨੁਠੁ ਵੀਡੁਵਾਰ. ਅਵਰਠੁ ਵੀਂਡੀ ਲਿਰੁਨੁਠੁ ਅਵਰਠੁ ਪਲੰਗੀਠਠੀਨ ਠੁਰਾਮ ਠਵੰਵਠਠਵ?

- (1) 4 ਕੀ.ਮੀ
- (2) $3\frac{1}{4}$ ਕੀ.ਮੀ
- (3) 1 ਕੀ.ਮੀ
- (4) $3\frac{1}{2}$ ਕੀ.ਮੀ

Options :

212807119005 1

212807119006 2

212807119007 3

212807119008 4

Question Number : 267 Question Id : 21280719752 Question Type : MCQ Option Shuffling : No Is Question Mandatory : No Calculator : None Response Time : N.A Think Time : N.A Minimum Instruction Time : 0

Correct Marks : 5 Wrong Marks : 1

Question Key Details :

Key	Value
Comprehension	MCQ

ఒక విద్యార్థి తన గృహం నుండి పాఠశాలకి $2\frac{1}{2}$ km/h వేగంతో వెళ్తాడు మరియు అతను పాఠశాలకి 6 నిమిషాలు అలస్యంగా చేరుకున్నాడు. తను 3 km/h వేగంతో వెళ్తే 10 నిమిషాలు ముందు చేరుతాడు. తన గృహం నుండి పాఠశాల దూరం ఎంత ?

- (1) 4 km
 (2) $3\frac{1}{4}$ km
 (3) 1 km
 (4) $3\frac{1}{2}$ km

Options :

212507119005 1
 212507119006 2
 212507119007 3
 212507119008 4

Question Number : 167 Question Id : 21250719752 Question Type : MCQ Option Shuffling : No Is Question Mandatory : No Calculator : None
 Response Time : N.A Think Time : N.A Minimum Instruction Time : 0

Correct Marks : 5 Wrong Marks : 1

Question Key Details :

Key	Value
Comprehension	MCQ

ایک طالب علم اپنے گھر سے $2\frac{1}{2}$ کلومیٹر فی گھنٹہ کی رفتار سے اسکول جاتا ہے۔ اور 6 منٹ کی دوری سے اسکول پہنچتا ہے۔ اگر وہ 3 کلومیٹر فی گھنٹہ کی رفتار سے سفر کرے تو وہ وقت مقررہ سے 10 منٹ پہلے پہنچتا ہے۔ تو اس کے گھر سے اسکول کی دوری کتنی ہے ؟

- km 4 (1)
 km $3\frac{1}{4}$ (2)
 km 1 (3)
 km $3\frac{1}{2}$ (4)

Options :

212507119005 1
 212507119006 2
 212507119007 3
 212507119008 4

Question Number : 168 Question Id : 21250719753 Question Type : MCQ Option Shuffling : No Is Question Mandatory : No Calculator : None
 Response Time : N.A Think Time : N.A Minimum Instruction Time : 0

Correct Marks : 5 Wrong Marks : 1

Question Key Details :

Key	Value
Comprehension	MCQ

Simplify $(0.\bar{1})^2 \times \{1 - 9 \times (0.1\bar{6})^2\}$

(1) $\frac{-1}{162}$

(2) $\frac{1}{108}$

(3) $\frac{7696}{10^6}$

(4) $\frac{1}{106}$

Options :

212807119009 : 1

212807119010 : 2

212807119011 : 3

212807119012 : 4

Question Number : 268 Question Id : 21280719753 Question Type : MCQ Option Shuffling : No Is Question Mandatory : No Calculator : None
Response Time : N.A Think Time : N.A Minimum Instruction Time : 0

Correct Marks : 5 Wrong Marks : 1

Question Key Details :

Key	Value
Comprehension	MCQ

$(0.\bar{1})^2 \times \{1 - 9 \times (0.1\bar{6})^2\}$ को सरल कीजिए।

(1) $\frac{-1}{162}$

(2) $\frac{1}{108}$

(3) $\frac{7696}{10^6}$

(4) $\frac{1}{106}$

Options :

212807119009 : 1

212807119010 : 2

212807119011 : 3

212807119012 : 4

Question Number : 268 Question Id : 21280719753 Question Type : MCQ Option Shuffling : No Is Question Mandatory : No Calculator : None
Response Time : N.A Think Time : N.A Minimum Instruction Time : 0

Correct Marks : 5 Wrong Marks : 1

Question Key Details :

Key	Value
Comprehension	MCQ

$$\text{সরল করা : } (0.\bar{1})^2 \times \{1 - 9 \times (0.1\bar{6})^2\}$$

(1) $\frac{-1}{162}$

(2) $\frac{1}{108}$

(3) $\frac{7696}{10^6}$

(4) $\frac{1}{106}$

Options :

212807119009 : 1

212807119010 : 2

212807119011 : 3

212807119012 : 4

Question Number : 268 Question Id : 21280719753 Question Type : MCQ Option Shuffling : No Is Question Mandatory : No Calculator : None
Response Time : N.A Think Time : N.A Minimum Instruction Time : 0

Correct Marks : 5 Wrong Marks : 1

Question Key Details :

Key	Value
Comprehension	MCQ

$$\text{সরল করো : } (0.\bar{1})^2 \times \{1 - 9 \times (0.1\bar{6})^2\}$$

(1) $\frac{-1}{162}$

(2) $\frac{1}{108}$

(3) $\frac{7696}{10^6}$

(4) $\frac{1}{106}$

Options :

212807119009 : 1

212807119010 : 2

212807119011 : 3

212807119012 : 4

Question Number : 268 Question Id : 21280719753 Question Type : MCQ Option Shuffling : No Is Question Mandatory : No Calculator : None
Response Time : N.A Think Time : N.A Minimum Instruction Time : 0

Correct Marks : 5 Wrong Marks : 1

Question Key Details :

Key	Value
Comprehension	MCQ

$$\text{સરળ બંનાવો } (0.\bar{1})^2 \times \{1 - 9 \times (0.1\bar{6})^2\}$$

(1) $\frac{-1}{162}$

(2) $\frac{1}{108}$

(3) $\frac{7696}{10^6}$

(4) $\frac{1}{106}$

Options :

212807119009 : 1

212807119010 : 2

212807119011 : 3

212807119012 : 4

Question Number : 268 Question Id : 21280719753 Question Type : MCQ Option Shuffling : No Is Question Mandatory : No Calculator : None
Response Time : N.A Think Time : N.A Minimum Instruction Time : 0

Correct Marks : 5 Wrong Marks : 1

Question Key Details :

Key	Value
Comprehension	MCQ

$$(0.\bar{1})^2 \times \{1 - 9 \times (0.1\bar{6})^2\} \text{ નો સરળ બંનાવો.}$$

(1) $\frac{-1}{162}$

(2) $\frac{1}{108}$

(3) $\frac{7696}{10^6}$

(4) $\frac{1}{106}$

Options :

212807119009 : 1

212807119010 : 2

212807119011 : 3

212807119012 : 4

Question Number : 268 Question Id : 21280719753 Question Type : MCQ Option Shuffling : No Is Question Mandatory : No Calculator : None
Response Time : N.A Think Time : N.A Minimum Instruction Time : 0

Correct Marks : 5 Wrong Marks : 1

Question Key Details :

Key	Value
Comprehension	MCQ

സോഡ്വാ $(0.\bar{1})^2 \times \{1 - 9 \times (0.1\bar{6})^2\}$

(1) $\frac{-1}{162}$

(2) $\frac{1}{108}$

(3) $\frac{7696}{10^6}$

(4) $\frac{1}{106}$

Options :

- 212807119009 : 1
- 212807119010 : 2
- 212807119011 : 3
- 212807119012 : 4

Question Number : 268 Question Id : 21280729753 Question Type : MCQ Option Shuffling : No Is Question Mandatory : No Calculator : None
Response Time : N.A Think Time : N.A Minimum Instruction Time : 0

Correct Marks : 5 Wrong Marks : 1

Question Key Details :

Key	Value
Comprehension	MCQ

സോഡ്വാകുരിയ്ക്കുക : $(0.\bar{1})^2 \times \{1 - 9 \times (0.1\bar{6})^2\}$

(1) $\frac{-1}{162}$

(2) $\frac{1}{108}$

(3) $\frac{7696}{10^6}$

(4) $\frac{1}{106}$

Options :

- 212807119009 : 1
- 212807119010 : 2
- 212807119011 : 3
- 212807119012 : 4

Question Number : 268 Question Id : 21280729753 Question Type : MCQ Option Shuffling : No Is Question Mandatory : No Calculator : None
Response Time : N.A Think Time : N.A Minimum Instruction Time : 0

Correct Marks : 5 Wrong Marks : 1

Question Key Details :

Key	Value
Comprehension	MCQ

$$(0.\bar{1})^2 \times \{1 - 9 \times (0.1\bar{6})^2\}$$
 ର ସରଳ ମୂଲ୍ୟ ।

(1) $\frac{-1}{162}$

(2) $\frac{1}{108}$

(3) $\frac{7696}{10^6}$

(4) $\frac{1}{106}$

Options :

212807119009 : 1

212807119010 : 2

212807119011 : 3

212807119012 : 4

Question Number : 268 Question Id : 21280719753 Question Type : MCQ Option Shuffling : No Is Question Mandatory : No Calculator : None
Response Time : N.A Think Time : N.A Minimum Instruction Time : 0

Correct Marks : 5 Wrong Marks : 1

Question Key Details :

Key	Value
Comprehension	MCQ

$$\text{ମ୍ୟାଟ ଚର୍ଚ୍ଚା - Simplify } (0.\bar{1})^2 \times \{1 - 9 \times (0.1\bar{6})^2\}$$

(1) $\frac{-1}{162}$

(2) $\frac{1}{108}$

(3) $\frac{7696}{10^6}$

(4) $\frac{1}{106}$

Options :

212807119009 : 1

212807119010 : 2

212807119011 : 3

212807119012 : 4

Question Number : 268 Question Id : 21280719753 Question Type : MCQ Option Shuffling : No Is Question Mandatory : No Calculator : None
Response Time : N.A Think Time : N.A Minimum Instruction Time : 0

Correct Marks : 5 Wrong Marks : 1

Question Key Details :

Key	Value
Comprehension	MCQ

$$\text{எளிமைப்படுத்து } (0.\bar{1})^2 \times \{1 - 9 \times (0.1\bar{6})^2\}$$

(1) $\frac{-1}{162}$

(2) $\frac{1}{108}$

(3) $\frac{7696}{10^9}$

(4) $\frac{1}{106}$

Options :

212807119009 : 1

212807119010 : 2

212807119011 : 3

212807119012 : 4

Question Number : 168 Question Id : 21280729753 Question Type : MCQ Option Shuffling : No Is Question Mandatory : No Calculator : None
Response Time : N.A Think Time : N.A Minimum Instruction Time : 0

Correct Marks : 5 Wrong Marks : 1

Question Key Details :

Key	Value
Comprehension	MCQ

$$(0.\bar{1})^2 \times \{1 - 9 \times (0.1\bar{6})^2\} \text{ సరళీకరించండి :}$$

(1) $\frac{-1}{162}$

(2) $\frac{1}{108}$

(3) $\frac{7696}{10^9}$

(4) $\frac{1}{106}$

Options :

212807119009 : 1

212807119010 : 2

212807119011 : 3

212807119012 : 4

Question Number : 168 Question Id : 21280729753 Question Type : MCQ Option Shuffling : No Is Question Mandatory : No Calculator : None
Response Time : N.A Think Time : N.A Minimum Instruction Time : 0

Correct Marks : 5 Wrong Marks : 1

Question Key Details :

Key	Value
Comprehension	MCQ

اس کو $(0.1)^2 \times \{1 - 9 \times (0.16)^2\}$ آسان کریں :

$$\frac{-1}{162} \quad (1)$$

$$\frac{1}{108} \quad (2)$$

$$\frac{7696}{10^6} \quad (3)$$

$$\frac{1}{106} \quad (4)$$

Options :

212807119009 1

212807119010 2

212807119011 3

212807119012 4

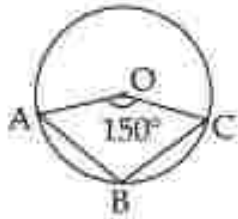
Question Number : 269 Question Id : 21280719754 Question Type : MCQ Option Shuffling : No Is Question Mandatory : No Calculator : None
Response Time : N/A Think Time : N/A Minimum Instruction Time : 0

Correct Marks : 5 Wrong Marks : 1

Question Key Details :

Key	Value
Comprehension	MCQ

In the figure, O is centre of the circle. What is the measure of $\angle ABC$?



(1) 210°

(2) 105°

(3) 100°

(4) 150°

Options :

212807119013 1

212807119014 2

212807119015 3

212807119016 4

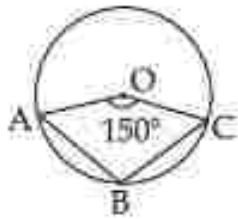
Question Number : 269 Question Id : 21280719754 Question Type : MCQ Option Shuffling : No Is Question Mandatory : No Calculator : None
Response Time : N/A Think Time : N/A Minimum Instruction Time : 0

Correct Marks : 5 Wrong Marks : 1

Question Key Details :

Key	Value
Comprehension	MCQ

आकृति में, O वृत्त का केन्द्र है। $\angle ABC$ का माप क्या है ?



- (1) 210°
- (2) 105°
- (3) 100°
- (4) 150°

Options :

- 212807119013 1
- 212807119014 2
- 212807119015 3
- 212807119016 4

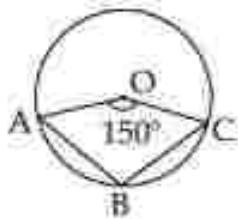
Question Number : 269 Question Id : 21280719754 Question Type : MCQ Option Shuffling : No Is Question Mandatory : No Calculator : None
Response Time : N.A Think Time : N.A Minimum Instruction Time : 0

Correct Marks : 5 Wrong Marks : 1

Question Key Details :

Key	Value
Comprehension	MCQ

চিত্রটিতে O বৈহুে বৃত্তের কেন্দ্র। $\angle ABC$ ৰ জোখ কি হ'ব ?



- (1) 210°
- (2) 105°
- (3) 100°
- (4) 150°

Options :

- 212807119013 1
- 212807119014 2
- 212807119015 3
- 212807119016 4

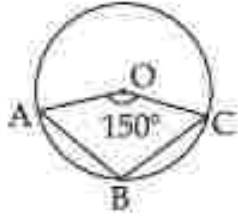
Question Number : 269 Question Id : 21280719754 Question Type : MCQ Option Shuffling : No Is Question Mandatory : No Calculator : None
Response Time : N.A Think Time : N.A Minimum Instruction Time : 0

Correct Marks : 5 Wrong Marks : 1

Question Key Details :

Key	Value
Comprehension	MCQ

પ્રદર્શિત ચિત્રે O હલ વૃત્તેર કેન્દ્ર । $\angle ABC$ -એર માપ કિ ય



- (1) 210°
(2) 105°
(3) 100°
(4) 150°

Options :

212807119013 1
212807119014 2
212807119015 3
212807119016 4

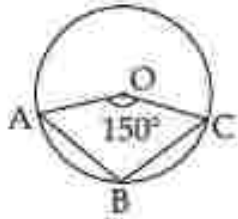
Question Number : 269 Question Id : 21280729754 Question Type : MCQ Option Shuffling : No Is Question Mandatory : No Calculator : None
Response Time : N.A Think Time : N.A Minimum Instruction Time : 0

Correct Marks : 5 Wrong Marks : 1

Question Key Details :

Key	Value
Comprehension	MCQ

આકૃતિમાં વર્તુળમાં O કેન્દ્ર છે. તો $\angle ABC$ નું માપ શું છે?



- (1) 210°
(2) 105°
(3) 100°
(4) 150°

Options :

212807119013 1
212807119014 2
212807119015 3
212807119016 4

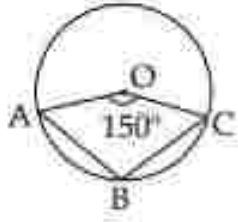
Question Number : 269 Question Id : 21280729754 Question Type : MCQ Option Shuffling : No Is Question Mandatory : No Calculator : None
Response Time : N.A Think Time : N.A Minimum Instruction Time : 0

Correct Marks : 5 Wrong Marks : 1

Question Key Details :

Key	Value
Comprehension	MCQ

ಚಿತ್ರದಲ್ಲಿ 'O' ಯು ವೃತ್ತದ ಕೇಂದ್ರ, $\angle ABC$ ಯ ಅಳತೆ ಏನು ?



- (1) 210°
- (2) 105°
- (3) 100°
- (4) 150°

Options :

- 212807119013 1
- 212807119014 2
- 212807119015 3
- 212807119016 4

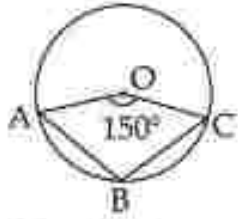
Question Number : 269 Question Id : 21280729754 Question Type : MCQ Option Shuffling : No Is Question Mandatory : No Calculator : None
Response Time : N.A Think Time : N.A Minimum Instruction Time : 0

Correct Marks : 5 Wrong Marks : 1

Question Key Details :

Key	Value
Comprehension	MCQ

ಪುಟಲ ಅಕೃತಿಯ O ಹಾ ವರ್ತುನ್ಯಾಚಾ ಕೇಂದ್ರ ಬಿಂದು आहे $\angle ABC$ चे मूल्य किती आहे ?



- (1) 210°
- (2) 105°
- (3) 100°
- (4) 150°

Options :

- 212807119013 1
- 212807119014 2
- 212807119015 3
- 212807119016 4

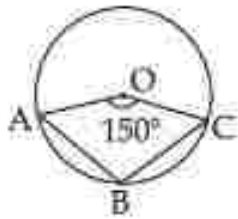
Question Number : 269 Question Id : 21280729754 Question Type : MCQ Option Shuffling : No Is Question Mandatory : No Calculator : None
Response Time : N.A Think Time : N.A Minimum Instruction Time : 0

Correct Marks : 5 Wrong Marks : 1

Question Key Details :

Key	Value
Comprehension	MCQ

തന്നിരിക്കുന്ന ചിത്രത്തിൽ, O വൃത്തത്തിന്റെ കേന്ദ്രമാണ്. $\angle ABC$ യുടെ അളവ് എത്ര ?



- (1) 210°
- (2) 105°
- (3) 100°
- (4) 150°

Options :

- 212807119013 1
- 212807119014 2
- 212807119015 3
- 212807119016 4

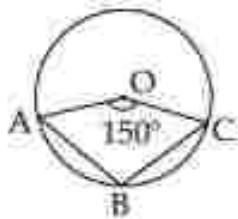
Question Number : 269 Question Id : 21280729754 Question Type : MCQ Option Shuffling : No Is Question Mandatory : No Calculator : None
Response Time : N.A Think Time : N.A Minimum Instruction Time : 0

Correct Marks : 5 Wrong Marks : 1

Question Key Details :

Key	Value
Comprehension	MCQ

നീളം ഉപയോഗിക്കാതെ O ബിന്ദു കൂടെ കേന്ദ്രം കിട്ടൂ. $\angle ABC$ ന്റെ മൂല്യം/മൂല്യം കണ്ടെത്തുക ?



- (1) 210°
- (2) 105°
- (3) 100°
- (4) 150°

Options :

- 212807119013 1
- 212807119014 2
- 212807119015 3
- 212807119016 4

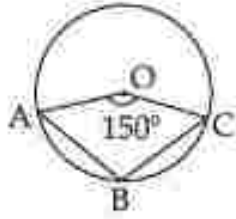
Question Number : 269 Question Id : 21280729754 Question Type : MCQ Option Shuffling : No Is Question Mandatory : No Calculator : None
Response Time : N.A Think Time : N.A Minimum Instruction Time : 0

Correct Marks : 5 Wrong Marks : 1

Question Key Details :

Key	Value
Comprehension	MCQ

सिंहत वलर O रेंवर दल वेंसर रें। अं $\angle ABC$ दल डलथ वी रें?



- (1) 210°
- (2) 105°
- (3) 100°
- (4) 150°

Options :

- 212807119013 1
- 212807119014 2
- 212807119015 3
- 212807119016 4

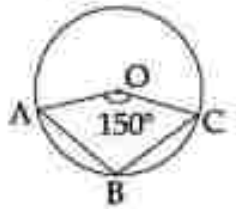
Question Number : 269 Question Id : 21280719754 Question Type : MCQ Option Shuffling : No Is Question Mandatory : No Calculator : None
Response Time : N.A Think Time : N.A Minimum Instruction Time : 0

Correct Marks : 5 Wrong Marks : 1

Question Key Details :

Key	Value
Comprehension	MCQ

11. த்தில், O ஂனபது வட்டத்தின் மையமாகும். $\angle ABC$ இன் அளவீடு ஂன்ன?



- (1) 210°
- (2) 105°
- (3) 100°
- (4) 150°

Options :

- 212807119013 1
- 212807119014 2
- 212807119015 3
- 212807119016 4

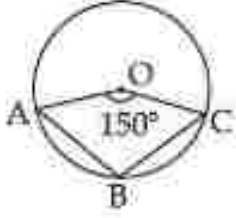
Question Number : 169 Question Id : 21280719754 Question Type : MCQ Option Shuffling : No Is Question Mandatory : No Calculator : None
Response Time : N.A Think Time : N.A Minimum Instruction Time : 0

Correct Marks : 5 Wrong Marks : 1

Question Key Details :

Key	Value
Comprehension	MCQ

పరబలో O అనేది వృత్త కేంద్రం. $\angle ABC$ కొలత ఎంత ?



- (1) 210°
- (2) 105°
- (3) 100°
- (4) 150°

Options :

- 212907119013 1
- 212907119014 2
- 212907119015 3
- 212907119016 4

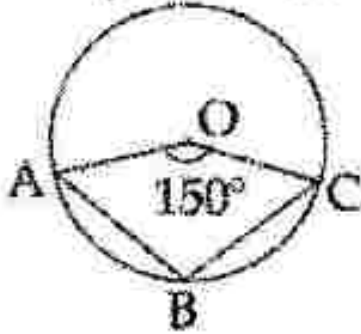
Question Number : 169 Question Id : 21280729754 Question Type : MCQ Option Shuffling : No Is Question Mandatory : No Calculator : None
Response Time : N.A Think Time : N.A Minimum Instruction Time : 0

Correct Marks : 5 Wrong Marks : 1

Question Key Details :

Key	Value
Comprehension	MCQ

شکل میں O دائرہ کا مرکز ہے۔ تو $\angle ABC$ کی پیمائش کیا ہے ؟



- 210° (1)
- 105° (2)
- 100° (3)
- 150° (4)

Options :

- 212907119013 1
- 212907119014 2
- 212907119015 3
- 212907119016 4

Question Number : 170 Question Id : 21280729755 Question Type : MCQ Option Shuffling : No Is Question Mandatory : No Calculator : None
Response Time : N.A Think Time : N.A Minimum Instruction Time : 0

Correct Marks : 5 Wrong Marks : 1

Question Key Details :

Key	Value
Comprehension	MCQ

The sum of the first four terms of an A.P. is 56 and the sum of its last four terms is 112. If its first term is 11, then find the number of terms.

- (1) 7
- (2) 11
- (3) 13
- (4) 17

Options :

- 212807119017 1
- 212807119018 2
- 212807119019 3
- 212807119020 4

Question Number : 270 Question Id : 21280729755 Question Type : MCQ Option Shuffling : No Is Question Mandatory : No Calculator : None
Response Time : N.A Think Time : N.A Minimum Instruction Time : 0

Correct Marks : 5 Wrong Marks : 1

Question Key Details :

Key	Value
Comprehension	MCQ

एक समांतर श्रेणी के प्रथम चार पदों का योग 56 है और इसके अंतिम चार पदों का योग 112 है। यदि इसका प्रथम पद 11 है तो पदों की संख्या ज्ञात कीजिए।

- (1) 7
- (2) 11
- (3) 13
- (4) 17

Options :

- 212807119017 1
- 212807119018 2
- 212807119019 3
- 212807119020 4

Question Number : 270 Question Id : 21280729755 Question Type : MCQ Option Shuffling : No Is Question Mandatory : No Calculator : None
Response Time : N.A Think Time : N.A Minimum Instruction Time : 0

Correct Marks : 5 Wrong Marks : 1

Question Key Details :

Key	Value
Comprehension	MCQ

এটা সমান্তর প্রগতির প্রথম চারটি সংখ্যার যোগফল হচ্ছে 56 আৰু শেষৰ চাৰিটা সংখ্যাৰ যোগফল হচ্ছে 112। যদি তাৰ প্রথম সংখ্যাটো 11, তেন্তে কিমানটা সংখ্যা আছে নিৰ্ধাৰণ কৰা।

- (1) 7
- (2) 11
- (3) 13
- (4) 17

Options :

- 212807119017 1
- 212807119018 2
- 212807119019 3
- 212807119020 4

Question Number : 270 Question Id : 21280719755 Question Type : MCQ Option Shuffling : No Is Question Mandatory : No Calculator : None
Response Time : N.A Think Time : N.A Minimum Instruction Time : 0

Correct Marks : 5 Wrong Marks : 1

Question Key Details :

Key	Value
Comprehension	MCQ

ಸಮಾಪ್ತರ ಪ್ರಗತಿಯಲ್ಲಿ ಪ್ರಥಮ ಪದದ ಸಂಖ್ಯೆ 56 ಆಗಿತ್ತು ಮತ್ತು ತರುವಿಕೆ ಮಾಡಿದ ಪದದ ಸಂಖ್ಯೆ 112. ಇದರಲ್ಲಿ ಪ್ರಥಮ ಪದ 11 ಆಗಿತ್ತು, ತರುವಿಕೆ ಮಾಡಿದ ಪದ ಸಂಖ್ಯೆ ನಿರ್ಧರಿಸಿ.

- (1) 7
- (2) 11
- (3) 13
- (4) 17

Options :

21280719017:1

21280719018:2

21280719019:3

21280719020:4

Question Number : 270 Question Id : 21280719755 Question Type : MCQ Option Shuffling : No Is Question Mandatory : No Calculator : None
Response Time : N.A Think Time : N.A Minimum Instruction Time : 0

Correct Marks : 5 Wrong Marks : 1

Question Key Details :

Key	Value
Comprehension	MCQ

A.P. ನಲ್ಲಿ ಪ್ರಥಮ ಪದದ ಸಂಖ್ಯೆ 56 ಆಗಿತ್ತು ಮತ್ತು ತರುವಿಕೆ ಮಾಡಿದ ಪದದ ಸಂಖ್ಯೆ 112 ಆಗಿತ್ತು. ಇದರಲ್ಲಿ ಪ್ರಥಮ ಪದ 11 ಆಗಿತ್ತು, ಪದದ ಸಂಖ್ಯೆ ನಿರ್ಧರಿಸಿ.

- (1) 7
- (2) 11
- (3) 13
- (4) 17

Options :

21280719017:1

21280719018:2

21280719019:3

21280719020:4

Question Number : 270 Question Id : 21280719755 Question Type : MCQ Option Shuffling : No Is Question Mandatory : No Calculator : None
Response Time : N.A Think Time : N.A Minimum Instruction Time : 0

Correct Marks : 5 Wrong Marks : 1

Question Key Details :

Key	Value
Comprehension	MCQ

A.P. ಯಲ್ಲಿ ಪ್ರಥಮ ಪದದ ಸಂಖ್ಯೆ 56 ಆಗಿತ್ತು ಮತ್ತು ತರುವಿಕೆ ಮಾಡಿದ ಪದದ ಸಂಖ್ಯೆ 112 ಆಗಿತ್ತು. ಇದರಲ್ಲಿ ಪ್ರಥಮ ಪದ 11 ಆಗಿತ್ತು, ಪದದ ಸಂಖ್ಯೆ ನಿರ್ಧರಿಸಿ.

- (1) 7
- (2) 11
- (3) 13
- (4) 17

Options :

21280719017:1

21280719018:2

212507119019.3
212507119020.4

Question Number : 270 Question Id : 21250719755 Question Type : MCQ Option Shuffling : No Is Question Mandatory : No Calculator : None
Response Time : N.A Think Time : N.A Minimum Instruction Time : 0
Correct Marks : 5 Wrong Marks : 1

Question Key Details :

Key	Value
Comprehension	MCQ

एक गणित श्रेढीतील पहिल्या चार अंकांची बेरीज 56 असून शेवटच्या चार अंकांची बेरीज 112 आहे. जर पहिला अंक 11 असेल, तर या श्रेढीतील एकूण अंक शोधा.

- (1) 7
- (2) 11
- (3) 13
- (4) 17

Options :

212507119019.3
212507119019.3
212507119019.3
212507119020.4

Question Number : 270 Question Id : 21250719755 Question Type : MCQ Option Shuffling : No Is Question Mandatory : No Calculator : None
Response Time : N.A Think Time : N.A Minimum Instruction Time : 0
Correct Marks : 5 Wrong Marks : 1

Question Key Details :

Key	Value
Comprehension	MCQ

ഒരു സമാന്തര ശ्रेढीയിലെ ആദ്യത്തെ 4 പദങ്ങളുടെ തുക 56 ൽ, അവസാനത്തെ 4 പദങ്ങളുടെ തുക 112 ആണ്. ഈ ശ्रेढीയിൽ ആകെ എത്ര പദങ്ങൾ ഉണ്ടായിരിക്കും ?

- (1) 7
- (2) 11
- (3) 13
- (4) 17

Options :

212507119019.3
212507119019.3
212507119019.3
212507119020.4

Question Number : 270 Question Id : 21250719755 Question Type : MCQ Option Shuffling : No Is Question Mandatory : No Calculator : None
Response Time : N.A Think Time : N.A Minimum Instruction Time : 0
Correct Marks : 5 Wrong Marks : 1

Question Key Details :

Key	Value
Comprehension	MCQ

Question Number : 270 Question Id : 21280729755 Question Type : MCQ Option Shuffling : No Is Question Mandatory : No Calculator : None
Response Time : N.A Think Time : N.A Minimum Instruction Time : 0

Correct Marks : 5 Wrong Marks : 1

Question Key Details :

Key	Value
Comprehension	MCQ

A.P. లోని మొదటి నాలుగు పదాల మొత్తం 56. చివరి నాలుగు పదాల మొత్తం 112. దాని మొదటి పదం 11 అయితే, పదాల సంఖ్య కనుక్కోండి.

- (1) 7
(2) 11
(3) 13
(4) 17

Options :

212807119015 1
212807119016 2
212807119018 3
212807119020 4

Question Number : 270 Question Id : 21280729755 Question Type : MCQ Option Shuffling : No Is Question Mandatory : No Calculator : None
Response Time : N.A Think Time : N.A Minimum Instruction Time : 0

Correct Marks : 5 Wrong Marks : 1

Question Key Details :

Key	Value
Comprehension	MCQ

ایک A.P کے پہلے چار نمبروں کا مجموعہ 56 ہے۔ اور اس کے آخری چار نمبروں کا مجموعہ 112 ہے۔ اب اگر اس کا پہلا نمبر 11 ہو، تو نمبروں کی کل تعداد کیا ہے۔

- (1) 7
(2) 11
(3) 13
(4) 17

Options :

212807119017 1
212807119018 2
212807119019 3
212807119020 4

Question Number : 271 Question Id : 21280729756 Question Type : MCQ Option Shuffling : No Is Question Mandatory : No Calculator : None
Response Time : N.A Think Time : N.A Minimum Instruction Time : 0

Correct Marks : 5 Wrong Marks : 1

Question Key Details :

Key	Value
Comprehension	MCQ

Match List - I with List - II.

List - I

(Santuries/National Park)

- (A) Kaziranga National Park
(B) Rann of Kutch Sanctuary
(C) Sunderbans National Park
(D) Periyar National Park

List - II

(Animals)

- (I) Wild Ass
(II) Elephants
(III) One-horned Rhinoceros
(IV) The Royal Bengal Tigers

Choose the **most appropriate** answer from the options given below :

- (1) (A)-(II), (B)-(I), (C)-(III), (D)-(IV)
(2) (A)-(III), (B)-(I), (C)-(IV), (D)-(II)
(3) (A)-(IV), (B)-(III), (C)-(II), (D)-(I)
(4) (A)-(IV), (B)-(II), (C)-(I), (D)-(III)

Options :

- 212807119021 1
212807119022 2
212807119023 3
212807119024 4

Question Number : 271 Question Id : 21280729756 Question Type : MCQ Option Shuffling : No Is Question Mandatory : No Calculator : None
Response Time : N.A Think Time : N.A Minimum Instruction Time : 0

Correct Marks : 5 Wrong Marks : 1

Question Key Details :

Key	Value
Comprehension	MCQ

सूची-I से सूची-II का मिलान कीजिए:

सूची-I

(अभयारण्य/राष्ट्रीय उद्यान)

- (A) काजीरंगा राष्ट्रीय उद्यान
(B) रन ऑफ कच्छ अभयारण्य
(C) सुंदरवन राष्ट्रीय उद्यान
(D) पेरियार राष्ट्रीय उद्यान

सूची-II

(पशु)

- (I) जंगली गधा
(II) हाथी
(III) एक सींग वाला राइनोसिरस
(IV) द रॉयल बंगाल टाइगर

नीचे दिए गए विकल्पों में से **सर्वाधिक** उपयुक्त उत्तर का चयन कीजिए :

- (1) (A)-(II), (B)-(I), (C)-(III), (D)-(IV)
(2) (A)-(III), (B)-(I), (C)-(IV), (D)-(II)
(3) (A)-(IV), (B)-(III), (C)-(II), (D)-(I)
(4) (A)-(IV), (B)-(II), (C)-(I), (D)-(III)

Options :

- 212807119021 1
212807119022 2
212807119023 3
212807119024 4

Question Number : 271 Question Id : 21280729756 Question Type : MCQ Option Shuffling : No Is Question Mandatory : No Calculator : None
Response Time : N.A Think Time : N.A Minimum Instruction Time : 0

Correct Marks : 5 Wrong Marks : 1

Question Key Details :

Key	Value
Comprehension	MCQ

তালিকা - I ন সৈতে তালিকা - II মিলোনা :

তালিকা - I	তালিকা - II
(অভয়াবণা বাণ্টীয় উদ্যান)	(জীব-জন্তু)
(A) কাজিৰঙা বাণ্টীয় উদ্যান	(I) কলবীয়া গাধা
(B) কচ্ছৰ কল অভয়াবণা	(II) হাতী
(C) সুন্দৰবন বাণ্টীয় উদ্যান	(III) এটা খৰ্গৰি গঁড়
(D) পেরিয়াৰ বাণ্টীয় উদ্যান	(IV) ঢেকীয়ালতীয়া বাঘ

তলত দিয়া বিকল্পসমূহৰপৰা শুদ্ধ উত্তৰটো বাছি উলিওৱা :

- (1) (A)-(II), (B)-(I), (C)-(III), (D)-(IV)
- (2) (A)-(III), (B)-(I), (C)-(IV), (D)-(II)
- (3) (A)-(IV), (B)-(III), (C)-(II), (D)-(I)
- (4) (A)-(IV), (B)-(II), (C)-(I), (D)-(III)

Options :

- 212807119021 1
212807119022 2
212807119023 3
212807119024 4

Question Number : 271 Question Id : 21280719756 Question Type : MCQ Option Shuffling : No Is Question Mandatory : No Calculator : None
Response Time : N.A Think Time : N.A Minimum Instruction Time : 0

Correct Marks : 5 Wrong Marks : 1

Question Key Details :

Key	Value
Comprehension	MCQ

তালিকা I এর সঙ্গে তালিকা II মেলাও :

তালিকা I	তালিকা II
(অভয়াবণা জাতীয় উদ্যান)	(পশু)
(A) কাজিৰঙা জাতীয় উদ্যান	(I) কল গাধা
(B) কচ্ছৰ ৰণ অভয়াবণা	(II) হাতী
(C) সুন্দৰবন জাতীয় উদ্যান	(III) এক-শৃঙ্গ গঁড়
(D) পেরিয়াৰ জাতীয় উদ্যান	(IV) বন্যাল বেঙ্গল টাইগাৰ

নিম্নলিখিত বিকল্পগুলি থেকে সঠিক উত্তৰটি বেছে নাও :

- (1) (A)-(II), (B)-(I), (C)-(III), (D)-(IV)
- (2) (A)-(III), (B)-(I), (C)-(IV), (D)-(II)
- (3) (A)-(IV), (B)-(III), (C)-(II), (D)-(I)
- (4) (A)-(IV), (B)-(II), (C)-(I), (D)-(III)

Options :

- 212807119021 1
212807119022 2
212807119023 3
212807119024 4

Question Number : 271 Question Id : 21280719756 Question Type : MCQ Option Shuffling : No Is Question Mandatory : No Calculator : None
Response Time : N.A Think Time : N.A Minimum Instruction Time : 0

Correct Marks : 5 Wrong Marks : 1

Question Key Details :

Key	Value
Comprehension	MCQ

ಸೂಚಿ-1 ಸಾથೆ ಸೂಚಿ-2 ನೆ ಗೆಡೆ.

ಸೂಚಿ-1

ಸೂಚಿ-2

- | | |
|--------------------------------|--------------------------|
| (A) ಡಾಡೆರಂಗ ನೆಗನಲ ಪಾಕ್ (ಡಿಖಾನ) | (I) ಕೆಗಲಿ ಗೆಡೆ |
| (B) ಕುಣಿ ಸೆನ್ಸುರಿ ನುಂ ರಣ | (II) ಹುಡುಗೊ |
| (C) ಸುಂದರನ ನೆಗನಲ ಪಾಕ್ | (III) ಕೆ-ಕಿಂಗಡಾಪಾಣಿ ಗೆಡೆ |
| (D) ಪೆರಿಯಾರ ನೆಗನಲ ಪಾಕ್ | (IV) ಕೆ ಕೆಲ ಲೆಗಾಲ ಡಾಡೆಗರ |

ನೆಚೆ ಆಪೆಲಾ ವಿಕಲಗೊಂಥೆ ಸಾಖೊ ಜವಾಬ ಪಸೆಡೆ ಕರೊ.

- (1) (A)-(II), (B)-(I), (C)-(III), (D)-(IV)
- (2) (A)-(III), (B)-(I), (C)-(IV), (D)-(II)
- (3) (A)-(IV), (B)-(III), (C)-(II), (D)-(I)
- (4) (A)-(IV), (B)-(II), (C)-(I), (D)-(III)

Options :

21280719021 1

21280719022 2

21280719023 3

21280719024 4

Question Number : 271 Question Id : 21280719756 Question Type : MCQ Option Shuffling : No Is Question Mandatory : No Calculator : None
Response Time : N.A Think Time : N.A Minimum Instruction Time : 0

Correct Marks : 5 Wrong Marks : 1

Question Key Details :

Key	Value
Comprehension	MCQ

ಪಟ್ಟಿ - 1 ಅನ್ನು ಪಟ್ಟಿ - 2 ರ ಜೊತೆ ಹೊಂದಿಸಿ.

ಪಟ್ಟಿ - 1

ಪಟ್ಟಿ - 2

- | | |
|---------------------------------|-----------------------------|
| (A) ಕಾಪರಂಗ ರಾಷ್ಟ್ರೀಯ ಉದ್ಯಾನವನ | (I) ಕಾಡು ಕತ್ತೆ |
| (B) ರಾನ್ ಆಫ್ ಕುಚ್ ವನ್ಯಧಾಮ | (II) ಅನೆಗಳು |
| (C) ಸುಂದರಬನ್ ರಾಷ್ಟ್ರೀಯ ಉದ್ಯಾನವನ | (III) ಒಂದು ಕೊಂಬಿನ ರೈನೋಸಾರಸ್ |
| (D) ಪೆರಿಯಾರ್ ರಾಷ್ಟ್ರೀಯ ಉದ್ಯಾನವನ | (IV) ರಾಯಲ್ ಬಂಗಾಲ ಹುಲಿಗಳು |

ಕೆಳಗೆ ನೀಡಿರುವ ಆಯ್ಕೆಗಳಿಂದ ಸರಿಯಾದ ಉತ್ತರವನ್ನು ಆರಿಸಿ.

- (1) (A)-(II), (B)-(I), (C)-(III), (D)-(IV)
- (2) (A)-(III), (B)-(I), (C)-(IV), (D)-(II)
- (3) (A)-(IV), (B)-(III), (C)-(II), (D)-(I)
- (4) (A)-(IV), (B)-(II), (C)-(I), (D)-(III)

Options :

21280719021 1

21280719022 2

21280719023 3

21280719024 4

Question Number : 271 Question Id : 21280719756 Question Type : MCQ Option Shuffling : No Is Question Mandatory : No Calculator : None
 Response Time : N.A Think Time : N.A Minimum Instruction Time : 0

Correct Marks : 5 Wrong Marks : 1

Question Key Details :

Key	Value
Comprehension	MCQ

यादी - I आणि यादी - II जुळवा.

यादी - I

(राष्ट्रीय उद्याने, अभयारण्ये)

- (A) काझिरंगा राष्ट्रीय उद्यान
- (B) कच्छचे रण अभयारण्य
- (C) सुंदरबन राष्ट्रीय उद्यान
- (D) पेरियार राष्ट्रीय उद्यान

यादी - II

(प्राणी)

- (I) जंगली गाढव
- (II) हत्ती
- (III) एक शिडूंगी गेंडा
- (IV) बंगाली वाघ

खालीलपैकी दिलेल्या पर्यायांमधून योग्य पर्याय निवडा :

- (1) (A)-(II), (B)-(I), (C)-(III), (D)-(IV)
- (2) (A)-(III), (B)-(I), (C)-(IV), (D)-(II)
- (3) (A)-(IV), (B)-(III), (C)-(II), (D)-(I)
- (4) (A)-(IV), (B)-(II), (C)-(I), (D)-(III)

Options :

- 212807119021 1
- 212807119022 2
- 212807119023 3
- 212807119024 4

Question Number : 271 Question Id : 21280719756 Question Type : MCQ Option Shuffling : No Is Question Mandatory : No Calculator : None
 Response Time : N.A Think Time : N.A Minimum Instruction Time : 0

Correct Marks : 5 Wrong Marks : 1

Question Key Details :

Key	Value
Comprehension	MCQ

പട്ടിക - I ഉം പട്ടിക - II ഉം തമ്മിൽ ചേരുമ്പടി ചേർക്കുക.

പട്ടിക - I

(വന്യജീവി സങ്കേതവും
ദേശീയ ഉദ്യാനവും)

- (A) കാസിനംഗ ദേശീയ ഉദ്യാനം
- (B) റാൻ ഓഫ് ഖച് സങ്കേതം
- (C) സുന്ദർബൻസ് ദേശീയ ഉദ്യാനം
- (D) പെരിയാർ ദേശീയ ഉദ്യാനം

പട്ടിക - II

(മൃഗങ്ങൾ)

- (I) കാട്ടു കഴുത
- (II) ആന
- (III) കണ്ടാമൃഗം
- (IV) ബംഗാൾ കടുവ

താഴെ കൊടുത്തിട്ടുള്ളതിൽ നിന്ന് ശരിയായ ഉത്തരം തിരഞ്ഞെടുത്ത് എഴുതുക.

- (1) (A)-(II), (B)-(I), (C)-(III), (D)-(IV)
- (2) (A)-(III), (B)-(I), (C)-(IV), (D)-(II)
- (3) (A)-(IV), (B)-(III), (C)-(II), (D)-(I)
- (4) (A)-(IV), (B)-(II), (C)-(I), (D)-(III)

Options :

212807119021 1

212807119022 2

212807119023 3

212807119024 4

Question Number : 271 Question Id : 21280729756 Question Type : MCQ Option Shuffling : No Is Question Mandatory : No Calculator : None
Response Time : N.A Think Time : N.A Minimum Instruction Time : 0

Correct Marks : 5 Wrong Marks : 1

Question Key Details :

Key	Value
Comprehension	MCQ

ଚାରିଜା-I ସହିତ ଚାରିଜା-II କୁ ମିଳାନ୍ତୁ ।

ଚାରିଜା-I

(ଅଲକ୍ଷ୍ୟାଳୟ)

ଚାରିଜା-II

(ପଶୁ)

(A) ଲାଞ୍ଜିରଙ୍ଗ ନ୍ୟାସନାଲ ପାର୍କ

(I) କଳମି ପଥ

(B) ରାଜ ଅଫ କୁଚ୍ ସେଣ୍ଟ୍ରି
(Rann of Kutch Sanctuary)

(II) ହାଟାମାରେ

(C) ସୁନ୍ଦରବନ ନ୍ୟାସନାଲ ପାର୍କ

(III) ଗୋଟିଏ ସିଙ୍ଗ ଥିବା ଲେଖା (Rhinoceros)

(D) ପେରିୟାର ନ୍ୟାସନାଲ ପାର୍କ

(IV) ରତ୍ନାଳ ବେଙ୍ଗାଲ ଦାଘ

ନିମ୍ନରେ ଦିଆଯାଇଥିବା ଦିନକ୍ରମ ମଧ୍ୟରୁ ସଠିକ୍ ଜୋଡ଼ିକୁ ଚିହ୍ନଟ କରନ୍ତୁ ।

(1) (A)-(II), (B)-(I), (C)-(III), (D)-(IV)

(2) (A)-(III), (B)-(I), (C)-(IV), (D)-(II)

(3) (A)-(IV), (B)-(III), (C)-(II), (D)-(I)

(4) (A)-(IV), (B)-(II), (C)-(I), (D)-(III)

Options :

212807119031 1

212807119022 2

212807119023 3

212807119024 4

Question Number : 271 Question Id : 21280729756 Question Type : MCQ Option Shuffling : No Is Question Mandatory : No Calculator : None
Response Time : N.A Think Time : N.A Minimum Instruction Time : 0

Correct Marks : 5 Wrong Marks : 1

Question Key Details :

Key	Value
Comprehension	MCQ

ਮਿਲਾਣ ਕਰੋ ਲਿਸਟ-I ਦਾ ਲਿਸਟ-II ਨਾਲ।

ਲਿਸਟ-I

(ਰਾਸ਼ਟਰੀ ਜੰਗਲ)

- (A) ਕਾਜ਼ੀਰੰਗਾ ਨੈਸ਼ਨਲ ਪਾਰਕ
- (B) ਰੇਨ ਆਫ ਕੁਚ ਸੈਂਚੂਰੀ
- (C) ਸੁੰਦਰਬਨ ਨੈਸ਼ਨਲ ਪਾਰਕ
- (D) ਪੈਰੀਆਰ ਨੈਸ਼ਨਲ ਪਾਰਕ

ਲਿਸਟ-II

(ਜਾਨਵਰਾਂ ਦੇ ਰਾਸ਼ਟਰੀ ਜੰਗਲ)

- (I) ਜੰਗਲੀ ਗਧਾ
- (II) ਹਾਥੀ
- (III) ਇਕ-ਸਿੰਭਾ ਗੈਂਡਾ
- (IV) ਸ਼ਾਹੀ ਬੰਗਾਲੀ ਬਾਘ

ਹੇਠ ਲਿਖਿਆ ਵਿਕਲਪਾਂ ਵਿੱਚ ਸਹੀ ਉੱਤਰ ਦੀ ਚੋਣ ਕਰੋ :

- (1) (A)-(II), (B)-(I), (C)-(III), (D)-(IV)
- (2) (A)-(III), (B)-(I), (C)-(IV), (D)-(II)
- (3) (A)-(IV), (B)-(III), (C)-(II), (D)-(I)
- (4) (A)-(IV), (B)-(II), (C)-(I), (D)-(III)

Options :

- 212807119021-1
- 212807119022-2
- 212807119023-3
- 212807119024-4

Question Number : 271 Question Id : 21280719756 Question Type : MCQ Option Shuffling : No Is Question Mandatory : No Calculator : None :
Response Time : N.A Think Time : N.A Minimum Instruction Time : 0

Correct Marks : 5 Wrong Marks : 1

Question Key Details :

Key	Value
Comprehension	MCQ

போட்டி பட்டியல்-I உடன் பட்டியல்-II

பட்டியல்-I

பட்டியல்-II

(சாண்டிரிஸ் தேசியப் பூங்கா)

(விவங்குகள்)

- | | |
|------------------------------|-----------------------------------|
| (A) காசிரங்கா தேசியப் பூங்கா | (I) காட்டுக் கழுதை |
| (B) ரான் ஆஃப் கட்ச் சரணாலயம் | (II) யானைகள் |
| (C) சுந்தரவன தேசியப் பூங்கா | (III) ஒற்றைக்கொம்பு காண்டாமிருகம் |
| (D) பெரியார் தேசியப் பூங்கா | (IV) ராயல் வங்காளப் புலிகள் |

கீழே கொடுக்கப்பட்டுள்ள விருப்பங்களிலிருந்துமிகவும் பொருத்தமான பதிவைத் தேர்வுசெய்க:

- (1) (A)-(II), (B)-(I), (C)-(III), (D)-(IV)
- (2) (A)-(III), (B)-(I), (C)-(IV), (D)-(II)
- (3) (A)-(IV), (B)-(III), (C)-(II), (D)-(I)
- (4) (A)-(IV), (B)-(II), (C)-(I), (D)-(III)

Options :

- 212807119021 1
212807119022 2
212807119023 3
212807119024 4

Question Number : 271 Question Id : 21280719756 Question Type : MCQ Option Shuffling : No Is Question Mandatory : No Calculator : None

Response Time : N.A Think Time : N.A Minimum Instruction Time : 0

Correct Marks : 5 Wrong Marks : 1

Question Key Details :

Key	Value
Comprehension	MCQ

జాబితా - I ను జాబితా - II తో అనుసరించండి :

జాబితా - I

(అభయారణ్య జాతీయ పార్కు)

- (A) కాజీరంగా నేషనల్ పార్కు
(B) రాన్సి అఫ్ కన్ అభయారణ్యం
(C) సుందర్బన్ నేషనల్ పార్కు
(D) పెరియర్ నేషనల్ పార్కు

జాబితా - II

(జంతువులు)

- (I) అడవి గాదద
(II) ఏనుగులు
(III) ఒక కొమ్ము అధ్యమ్యుగం
(IV) రాయల్ బెంగాల్ వులులు

క్రింది ఇచ్చిన అచ్చికాల నుండి వలైన జవాయి ఎన్నుకోండి :

- (1) (A)-(II), (B)-(I), (C)-(III), (D)-(IV)
(2) (A)-(III), (B)-(I), (C)-(IV), (D)-(II)
(3) (A)-(IV), (B)-(III), (C)-(II), (D)-(I)
(4) (A)-(IV), (B)-(II), (C)-(I), (D)-(III)

Options :

- 212807119021-1
212807119022-1
212807119023-3
212807119024-4

Question Number : 271 Question Id : 21280729756 Question Type : MCQ Option Shuffling : No Is Question Mandatory : No Calculator : None
Response Time : N.A Think Time : N.A Minimum Instruction Time : 0
Correct Marks : 5 Wrong Marks : 1
Question Key Details :

Key	Value
Comprehension	MCQ

سٹ I کولت II سے ملائیں۔

سٹ II

سٹ I

(جانور)

(سنگھری نیشنل پارک)

(I) جنگلی گدھا

(A) کازیرنگی نیشنل پارک

(II) ہاتھی

(B) رن آف کچھ سنگھری

(III) ایک سنگھ و اگینڈا

(C) سندھین نیشنل پارک

(IV) رائل بنگال ٹائیگر

(D) بیھار نیشنل پارک

مندرجہ ذیل میں سے درست جواب کی نشان دہی کریں :

- (1) (A)-(II), (B)-(I), (C)-(III), (D)-(IV)
(2) (A)-(III), (B)-(I), (C)-(IV), (D)-(II)
(3) (A)-(IV), (B)-(III), (C)-(II), (D)-(I)
(4) (A)-(IV), (B)-(II), (C)-(I), (D)-(III)

Options :

- 212807119021 1
- 212807119022 2
- 212807119023 3
- 212807119024 4

Question Number : 272 Question Id : 21280729757 Question Type : MCQ Option Shuffling : No Is Question Mandatory : No Calculator : None
Response Time : N.A Think Time : N.A Minimum Instruction Time : 0

Correct Marks : 5 Wrong Marks : 1

Question Key Details :

Key	Value
Comprehension	MCQ

Out of which Union Territories of India has more than one district ?

- (1) Dadar and Nager Haveli
- (2) Lakshadweep
- (3) Puducheery
- (4) Chandigarh

Options :

- 212807119025 1
- 212807119026 2
- 212807119027 3
- 212807119028 4

Question Number : 272 Question Id : 21280729757 Question Type : MCQ Option Shuffling : No Is Question Mandatory : No Calculator : None
Response Time : N.A Think Time : N.A Minimum Instruction Time : 0

Correct Marks : 5 Wrong Marks : 1

Question Key Details :

Key	Value
Comprehension	MCQ

भारत के किस संघ राज्य क्षेत्र में एक से अधिक जिला है ?

- (1) दादर और नगर हवेली
- (2) लक्षद्वीप
- (3) पुदुचेरी
- (4) चंडीगढ़

Options :

- 212807119025 1
- 212807119026 2
- 212807119027 3
- 212807119028 4

Question Number : 272 Question Id : 21280729757 Question Type : MCQ Option Shuffling : No Is Question Mandatory : No Calculator : None
Response Time : N.A Think Time : N.A Minimum Instruction Time : 0

Correct Marks : 5 Wrong Marks : 1

Question Key Details :

Key	Value
Comprehension	MCQ

কলকাতা কোম্পানি শাসিত অঞ্চলত এখনতকৈ অধিক জিলা আছে।

- (1) দাদর আৰু নগৰ হাভেলী
- (2) লক্ষদ্বীপ
- (3) পুডুচেরী
- (4) চণ্ডীগড়

Options :

- 112807119021 1
112807119026 2
112807119027 3
112807119028 4

Question Number : 273 Question Id : 21280729757 Question Type : MCQ Option Shuffling : No Is Question Mandatory : No Calculator : None
Response Time : N.A Think Time : N.A Minimum Instruction Time : 0

Correct Marks : 5 Wrong Marks : 1

Question Key Details :

Key	Value
Comprehension	MCQ

ভাৰতের কোন কোম্পানি শাসিত অঞ্চলে একটির বেশি জেলা আছে।

- (1) দাদরা এবং নগৰ হাভেলি
- (2) লক্ষদ্বীপ
- (3) পুডুচেরি
- (4) চণ্ডীগড়

Options :

- 112807119025 1
112807119026 2
112807119027 3
112807119028 4

Question Number : 273 Question Id : 21280729757 Question Type : MCQ Option Shuffling : No Is Question Mandatory : No Calculator : None
Response Time : N.A Think Time : N.A Minimum Instruction Time : 0

Correct Marks : 5 Wrong Marks : 1

Question Key Details :

Key	Value
Comprehension	MCQ

ভাৰতনা গুণ কেন্দ্ৰস্থানিত প্ৰদেশাৰ্মা অঞ্চলত অধিক জিলা আছে।

- (1) দাদরা আৰু নগৰ হাভেলী
- (2) লক্ষদ্বীপ
- (3) পুডুচেরী
- (4) চণ্ডীগড়

Options :

- 112807119021 1
112807119026 2
112807119027 3
112807119028 4

Question Number : 273 Question Id : 21280729757 Question Type : MCQ Option Shuffling : No Is Question Mandatory : No Calculator : None
Response Time : N.A Think Time : N.A Minimum Instruction Time : 0

Correct Marks : 5 Wrong Marks : 1

Question Key Details :

Key	Value
Comprehension	MCQ

ಭಾರತದ ಕೇಂದ್ರಾಡಳಿತ ಪ್ರದೇಶಗಳಲ್ಲಿ ಯಾವುದು ಒಂದಕ್ಕಿಂತ ಹೆಚ್ಚು ಜಿಲ್ಲೆಯನ್ನು ಹೊಂದಿದೆ ?

- (1) ದಾದರ ಮತ್ತು ನಾಗರ ಹವೇಲಿ
- (2) ಲಕ್ಷದ್ವೀಪ
- (3) ಪುದುಚೇರಿ
- (4) ಚಂಡೀಗಢ

Options :

- 212807119025 1
- 212807119026 2
- 212807119027 3
- 212807119028 4

Question Number : 272 Question Id : 21280719757 Question Type : MCQ Option Shuffling : No Is Question Mandatory : No Calculator : None
Response Time : N.A Think Time : N.A Minimum Instruction Time : 0

Correct Marks : 5 Wrong Marks : 1

Question Key Details :

Key	Value
Comprehension	MCQ

ಭಾರತದಲ್ಲಿ ಪುಡುಚೇರಿ ಕೇಂದ್ರಾಡಳಿತ ಪ್ರದೇಶದ ಏಕಾಪೇಕ್ಷಾ ಅಧಿಕ ಜಿಲ್ಲೆ ಆಗಿದೆ ?

- (1) ದಾದರ ಮತ್ತು ನಾಗರ ಹವೇಲಿ
- (2) ಲಕ್ಷದ್ವೀಪ
- (3) ಪುದುಚೇರಿ
- (4) ಚಂಡೀಗಢ

Options :

- 212807119025 1
- 212807119026 2
- 212807119027 3
- 212807119028 4

Question Number : 272 Question Id : 21280719757 Question Type : MCQ Option Shuffling : No Is Question Mandatory : No Calculator : None
Response Time : N.A Think Time : N.A Minimum Instruction Time : 0

Correct Marks : 5 Wrong Marks : 1

Question Key Details :

Key	Value
Comprehension	MCQ

ಒಳಗಿನಲ್ಲಿ ಕೃಷಿಯನ್ನು ಪ್ರೋತ್ಸಾಹಿಸಲು ಹೊಸ ಯೋಜನೆ ಏರ್ಪಡಿಸಿ ?

- (1) ಒಳಗಿನ ಯಾವ ಯೋಜನೆ
- (2) ಒಳಗಿನ ಯಾವ ಯೋಜನೆ
- (3) ಒಳಗಿನ ಯಾವ ಯೋಜನೆ
- (4) ಒಳಗಿನ ಯಾವ ಯೋಜನೆ

Options :

- 212807119025 1
- 212807119026 2
- 212807119027 3
- 212807119028 4

Question Number : 272 Question Id : 21260719757 Question Type : MCQ Option Shuffling : No Is Question Mandatory : No Calculator : None
Response Time : N.A Think Time : N.A Minimum Instruction Time : 0

Correct Marks : 5 Wrong Marks : 1

Question Key Details :

Key	Value
Comprehension	MCQ

ନିମ୍ନୋକ୍ତରୁ କେଉଁ କେନ୍ଦ୍ରସାଧିତ ପ୍ରଦେଶରେ ଗୋଟିଏରୁ ଅଧିକ ଚିଲି ଅଛି ?

- (1) ଦାଦର ଏବଂ ନଗର ହରେକ୍ଷି
- (2) ଲକ୍ଷ୍ମପୁର
- (3) ପୁରୁଷୋତ୍ତମ
- (4) କୋଣାର୍କ

Options :

21260719025 1

21260719026 2

21260719027 3

21260719028 4

Question Number : 272 Question Id : 21260719757 Question Type : MCQ Option Shuffling : No Is Question Mandatory : No Calculator : None
Response Time : N.A Think Time : N.A Minimum Instruction Time : 0

Correct Marks : 5 Wrong Marks : 1

Question Key Details :

Key	Value
Comprehension	MCQ

ਹੇਠ ਲਿਖੇ ਵਿਚੋਂ ਭਾਰਤ ਦੇ ਕਿਸ ਕੇਂਦਰ ਸ਼ਾਸਤ ਪ੍ਰਦੇਸ਼ ਵਿੱਚ ਇਕ ਤੋਂ ਵੱਧ ਜਿਲੇ ਹਨ?

- (1) ਦਾਦਰ ਅਤੇ ਨਾਗਰ ਹରେਲੀ
- (2) ਲକ୍ଷਮਦੀਪ
- (3) ਪੁਡੁਚੇਰੀ
- (4) ਚੰਡੀਗੜ੍ਹ

Options :

21260719025 1

21260719026 2

21260719027 3

21260719028 4

Question Number : 273 Question Id : 21260719757 Question Type : MCQ Option Shuffling : No Is Question Mandatory : No Calculator : None
Response Time : N.A Think Time : N.A Minimum Instruction Time : 0

Correct Marks : 5 Wrong Marks : 1

Question Key Details :

Key	Value
Comprehension	MCQ

இந்தியாவின் எந்த யூனியன் பிரதேசங்களில் ஒன்றுக்கு மேற்பட்ட மாவட்டங்கள் உள்ளன?

- (1) தாதர் மற்றும் நாகர் ஹவேலி
- (2) வடசந்தீவு
- (3) புதுச்சேரி
- (4) சண்டிகர்

Options :

- 112807119021 1
112807119026 2
112807119027 3
112807119028 4

Question Number : 273 Question Id : 21280729757 Question Type : MCQ Option Shuffling : No Is Question Mandatory : No Calculator : None Response Time : N.A Think Time : N.A Minimum Instruction Time : 0

Correct Marks : 5 Wrong Marks : 1

Question Key Details :

Key	Value
Comprehension	MCQ

ఏ భారత కేంద్రపాలిత ప్రాంతంలో ఒకటి కన్నా ఎక్కువ జిల్లాలున్నాయి ?

- (1) దాదర్ అండ్ నగర్ హవేలీ
- (2) వత్సాన్
- (3) పుదుచ్చేరి
- (4) చండీఘర్

Options :

- 112807119025 1
112807119026 2
112807119027 3
112807119028 4

Question Number : 272 Question Id : 21280729757 Question Type : MCQ Option Shuffling : No Is Question Mandatory : No Calculator : None Response Time : N.A Think Time : N.A Minimum Instruction Time : 0

Correct Marks : 5 Wrong Marks : 1

Question Key Details :

Key	Value
Comprehension	MCQ

ہندوستان میں مرکز کے ذریعہ انتظام ہوتے ہیں سے کس میں ایک سے زیادہ اضلاع ہیں۔

- (1) دادرائڈ ناگر ہولی
- (2) لکھنؤ
- (3) پانڈیچیری
- (4) چنڈی گڑھ

Options :

- 112807119025 1
112807119026 2

212507119029 3
212507119029 4

Question Number : 273 Question Id : 21250719755 Question Type : MCQ Option Shuffling : No Is Question Mandatory : No Calculator : None
Response Time : N.A Think Time : N.A Minimum Instruction Time : 0

Correct Marks : 5 Wrong Marks : 1

Question Key Details :

Key	Value
Comprehension	MCQ

Out of these which is the most abundant metal found in the earth's crust ?

- (1) Copper
- (2) Iron
- (3) Aluminium
- (4) Zinc

Options :

212507119029 1
212507119030 2
212507119031 3
212507119032 4

Question Number : 273 Question Id : 21250719755 Question Type : MCQ Option Shuffling : No Is Question Mandatory : No Calculator : None
Response Time : N.A Think Time : N.A Minimum Instruction Time : 0

Correct Marks : 5 Wrong Marks : 1

Question Key Details :

Key	Value
Comprehension	MCQ

भू-पपटी (अर्थस क्रस्ट) में निम्नलिखित में से कौन-सा अधिकांश प्रचुर धातु पाई जाती है ?

- (1) तांबा
- (2) लोहा
- (3) एल्युमीनियम
- (4) जस्ता

Options :

212507119029 1
212507119030 2
212507119031 3
212507119032 4

Question Number : 273 Question Id : 21250719755 Question Type : MCQ Option Shuffling : No Is Question Mandatory : No Calculator : None
Response Time : N.A Think Time : N.A Minimum Instruction Time : 0

Correct Marks : 5 Wrong Marks : 1

Question Key Details :

Key	Value
Comprehension	MCQ

पृथिवी के अन्तर्गतात् कौनसा धातु प्रचुर परिमाणे उपलब्ध है ?

- (1) ताम्र
- (2) लौ
- (3) एल्युमिनियम
- (4) दस्ता (जिंक)

Options :

212507119029 1

212507119030 1
212507119031 3
212507119032 4

Question Number : 273 Question Id : 21250729758 Question Type : MCQ Option Shuffling : No Is Question Mandatory : No Calculator : None
Response Time : N.A Think Time : N.A Minimum Instruction Time : 0

Correct Marks : 5 Wrong Marks : 1

Question Key Details :

Key	Value
Comprehension	MCQ

ನಿಮ್ಮರ ಕೂಡಾ ಖಾತುಡಿ ಪುಖಿಲಿರ ಡು-ಡುಕು ಸಬಾಡುಯು ವುಶಿ ಪರಿಮಾಥು ಪಾಠುಯಾ ಖಾತು ?

- (1) ತಾಢಾ
- (2) ಲೂಹಾ
- (3) ಅಯಾಲುನಿರಾಢಾ
- (4) ದಠಾ

Options :

212507119029 1
212507119030 1
212507119031 3
212507119032 4

Question Number : 273 Question Id : 21250729758 Question Type : MCQ Option Shuffling : No Is Question Mandatory : No Calculator : None
Response Time : N.A Think Time : N.A Minimum Instruction Time : 0

Correct Marks : 5 Wrong Marks : 1

Question Key Details :

Key	Value
Comprehension	MCQ

ನಿಖುನಾಢಾಢಿ ಪುಖಿಲಿರಾ ಪುಖಿಲಿರಾ ಸಿಖಿಲಿ ವು ಖುಢಾಠುಢಾ ಢುಲಾ ಢುಖಲಿ ಧಾಲು ಕುರಿ ಲಿ?

- (1) ಕುಿಪು
- (2) ಢಾಪುನ
- (3) ಅಯಾಲುನಿರಾಢಾ
- (4) ಠಿಲಿ

Options :

212507119029 1
212507119030 1
212507119031 3
212507119032 4

Question Number : 273 Question Id : 21250729758 Question Type : MCQ Option Shuffling : No Is Question Mandatory : No Calculator : None
Response Time : N.A Think Time : N.A Minimum Instruction Time : 0

Correct Marks : 5 Wrong Marks : 1

Question Key Details :

Key	Value
Comprehension	MCQ

ಇವುಗುಕುಲಿ ಡುಗುಢುಢುಲಿ ಅಡುಕು ಖುರಕುಖಾಗಿ ಕುಡುಖುಡು ಲುಕುಡು ಯಾಢುಡು ?

- (1) ತಾಢು
- (2) ಕುಢು
- (3) ಅಯಾಲುನಿರಾಢು
- (4) ಕುಡು

Options :

- 212807119029 1
- 212807119030 2
- 212807119031 3
- 212807119032 4

Question Number : 273 Question Id : 21280729758 Question Type : MCQ Option Shuffling : No Is Question Mandatory : No Calculator : None
Response Time : N.A Think Time : N.A Minimum Instruction Time : 0

Correct Marks : 5 Wrong Marks : 1

Question Key Details :

Key	Value
Comprehension	MCQ

പുതിയതുകൊണ്ട് ധാതു പൃഷ്ഠിയിൽ കടന്നുപോകുന്ന വിപുല പ്രമാണാൽ ആണ് ?

- (1) താമ്ര
- (2) ലോഹം
- (3) അലൂമിനിയം
- (4) ഇരുമ്പ്

Options :

- 212807119029 1
- 212807119030 2
- 212807119031 3
- 212807119032 4

Question Number : 273 Question Id : 21280729758 Question Type : MCQ Option Shuffling : No Is Question Mandatory : No Calculator : None
Response Time : N.A Think Time : N.A Minimum Instruction Time : 0

Correct Marks : 5 Wrong Marks : 1

Question Key Details :

Key	Value
Comprehension	MCQ

കാൽ കെട്ടിയിടുന്നതിനുള്ളവയിൽ ഭൂമിയുടെ ഉപരിതലത്തിൽ ഏറ്റവും കൂടുതൽ കാണപ്പെടുന്ന ലോഹം ഏത് ?

- (1) ചെമ്പ്
- (2) ഇരുമ്പ്
- (3) അലൂമിനിയം
- (4) സിങ്ക്

Options :

- 212807119029 1
- 212807119030 2
- 212807119031 3
- 212807119032 4

Question Number : 273 Question Id : 21280729758 Question Type : MCQ Option Shuffling : No Is Question Mandatory : No Calculator : None
Response Time : N.A Think Time : N.A Minimum Instruction Time : 0

Correct Marks : 5 Wrong Marks : 1

Question Key Details :

Key	Value
Comprehension	MCQ

ନିମ୍ନୋକ୍ତ ରେଖି ଧାତୁଟି ପୃଷ୍ଠତାତ୍ତ୍ୱ ବାହ୍ୟାବରଣରେ ଯଦାୟତ ପ୍ରଭୃତ ମାତ୍ରାରେ ମିଳିଥାଏ ?

- (1) ଟାଙ୍ଗ
- (2) ଲୁହା
- (3) ପାଲୁମିନିୟମ
- (4) ରଘା (ଚିକ)

Options :

- 212807119029 1
212807119030 2
212807119031 3
212807119032 4

Question Number : 273 Question Id : 21280729758 Question Type : MCQ Option Shuffling : No Is Question Mandatory : No Calculator : None
Response Time : N.A Think Time : N.A Minimum Instruction Time : 0

Correct Marks : 5 Wrong Marks : 1

Question Key Details :

Key	Value
Comprehension	MCQ

ਇਹਨਾਂ ਵਿੱਚੋਂ ਕਿਹੜੀ ਧਰਤੀ ਦੀ ਖਰਤ ਵਿਚ ਭਰਪੂਰ ਧਾਤੂ ਪਾਈ ਜਾਂਦੀ ਹੈ?

- (1) ਕਾੱਪਰ
- (2) ਆਇਰਨ
- (3) ਐਲੂਮੀਨੀਅਮ
- (4) ਜਿੰਕ

Options :

- 212807119029 1
212807119030 2
212807119031 3
212807119032 4

Question Number : 273 Question Id : 21280729758 Question Type : MCQ Option Shuffling : No Is Question Mandatory : No Calculator : None
Response Time : N.A Think Time : N.A Minimum Instruction Time : 0

Correct Marks : 5 Wrong Marks : 1

Question Key Details :

Key	Value
Comprehension	MCQ

இவற்றில் பூமியின் மேலோட்டில் மிகுதியாகக் காணப்படும் உலோகம் எது?

- (1) செம்பு
- (2) இரும்பு
- (3) அலுமினியம்
- (4) துத்தநாகம்

Options :

- 212807119029 1
212807119030 2
212807119031 3
212807119032 4

Question Number : 273 Question Id : 21280729758 Question Type : MCQ Option Shuffling : No Is Question Mandatory : No Calculator : None
Response Time : N.A Think Time : N.A Minimum Instruction Time : 0

Correct Marks : 5 Wrong Marks : 1

Question Key Details :

Key	Value
Comprehension	MCQ

భూమి పై పౌరలలో విరివిగా లభించు లోహం ఏది ?

- (1) కాపర్
- (2) ఐరన్
- (3) అల్యూమినియం
- (4) టింక్

Options :

212907119029 : 1
212907119030 : 2
212907119031 : 3
212907119032 : 4

Question Number : 273 Question Id : 21290719758 Question Type : MCQ Option Shuffling : No Is Question Mandatory : No Calculator : None
Response Time : N.A Think Time : N.A Minimum Instruction Time : 0

Correct Marks : 5 Wrong Marks : 1

Question Key Details :

Key	Value
Comprehension	MCQ

زمین کی سطح میں سب سے زیادہ مقدار میں پایا جانے والا اوجحات کون سا ہے ؟

- (1) تانبا
- (2) لوہا
- (3) الومینیم
- (4) زنک

Options :

212907119029 : 1
212907119030 : 2
212907119031 : 3
212907119032 : 4

Question Number : 274 Question Id : 21290719759 Question Type : MCQ Option Shuffling : No Is Question Mandatory : No Calculator : None
Response Time : N.A Think Time : N.A Minimum Instruction Time : 0

Correct Marks : 5 Wrong Marks : 1

Question Key Details :

Key	Value
Comprehension	MCQ

Article 21A of the constitution deals with right to education. According to which constitution amendment the article has been inserted ?

- (1) 42nd
- (2) 44th
- (3) 96th
- (4) 86th

Options :

212907119033 : 1
212907119034 : 2

212507119033 3
212507119034 4

Question Number : 274 Question Id : 21280719759 Question Type : MCQ Option Shuffling : No Is Question Mandatory : No Calculator : None
Response Time : N.A Think Time : N.A Minimum Instruction Time : 0

Correct Marks : 5 Wrong Marks : 1

Question Key Details :

Key	Value
Comprehension	MCQ

भारतीय संविधान का अनुच्छेद 21ए शिक्षा के अधिकार से संबंधित है। किस संविधानिक संशोधन द्वारा इस अनुच्छेद को जोड़ा गया है ?

- (1) 42वाँ
- (2) 44वाँ
- (3) 96वाँ
- (4) 86वाँ

Options :

212507119033 3
212507119034 4
212507119035 3
212507119036 4

Question Number : 274 Question Id : 21280719759 Question Type : MCQ Option Shuffling : No Is Question Mandatory : No Calculator : None
Response Time : N.A Think Time : N.A Minimum Instruction Time : 0

Correct Marks : 5 Wrong Marks : 1

Question Key Details :

Key	Value
Comprehension	MCQ

সংবিধানৰ অনুচ্ছেদ 21A হৈ শিক্ষাৰ অধিকাৰৰ বিষয়ে কয়। কোনখন সংবিধান সংশোধনীৰে, অনুচ্ছেদটো ভৰোৱা হৈছিল ?

- (1) 42 তম
- (2) 44 তম
- (3) 96 তম
- (4) 86 তম

Options :

212507119033 3
212507119034 4
212507119035 3
212507119036 4

Question Number : 274 Question Id : 21280719759 Question Type : MCQ Option Shuffling : No Is Question Mandatory : No Calculator : None
Response Time : N.A Think Time : N.A Minimum Instruction Time : 0

Correct Marks : 5 Wrong Marks : 1

Question Key Details :

Key	Value
Comprehension	MCQ

સંવિધાને 21A થારા શિક્ષણ અધિકાર સમ્પર્કિત કોન સંવિધાન સંશોધની અનુસારે થારાટિ સમિલેશિત કરા હરોલે ?

- (1) 42 તમ
- (2) 44 તમ
- (3) 96 તમ
- (4) 86 તમ

Options :

- 112807119033 1
112807119034 1
112807119035 3
112807119036 4

Question Number : 274 Question Id : 11280729759 Question Type : MCQ Option Shuffling : No Is Question Mandatory : No Calculator : None
Response Time : N.A Think Time : N.A Minimum Instruction Time : 0

Correct Marks : 5 Wrong Marks : 1

Question Key Details :

Key	Value
Comprehension	MCQ

બંધારણની અનુચ્છેદ 21 A શિક્ષણના અધિકારો સાથે સંબંધિત છે તે અનુસંધાનનો કયા બંધારણીય સુધારા માટે સૂચના આપવામાં આવી છે?

- (1) 42nd
- (2) 44th
- (3) 96th
- (4) 86th

Options :

- 112807119033 1
112807119034 1
112807119035 3
112807119036 4

Question Number : 274 Question Id : 11280729759 Question Type : MCQ Option Shuffling : No Is Question Mandatory : No Calculator : None
Response Time : N.A Think Time : N.A Minimum Instruction Time : 0

Correct Marks : 5 Wrong Marks : 1

Question Key Details :

Key	Value
Comprehension	MCQ

સંવિધાનના અર્ટિકલ 21A યુનાઈટેડ સ્ટેટ્સ સંબંધિત છે. સંવિધાનના યુનાઈટેડ સ્ટેટ્સ સંબંધિત કયા અર્ટિકલનું ડેરિવેશન છે ?

- (1) 42nd
- (2) 44th
- (3) 96th
- (4) 86th

Options :

- 112807119033 1
112807119034 1
112807119035 3
112807119036 4

Question Number : 274 Question Id : 11280729759 Question Type : MCQ Option Shuffling : No Is Question Mandatory : No Calculator : None
Response Time : N.A Think Time : N.A Minimum Instruction Time : 0

Correct Marks : 5 Wrong Marks : 1

Question Key Details :

Key	Value
Comprehension	MCQ

राज्य घटनेतील अनुच्छेद 21A मध्ये शिक्षणाच्या हक्काची तरतूद करण्यात आली आहे. कितल्या घटनादुरुस्ती अन्वये हा अनुच्छेद घटनेत समाविष्ट करण्यात आला?

- (1) 42^{वा}
- (2) 44^{वा}
- (3) 96^{वा}
- (4) 86^{वा}

Options :

- 212807119033 1
- 212807119034 2
- 212807119035 3
- 212807119036 4

Question Number : 274 Question Id : 21280719759 Question Type : MCQ Option Shuffling : No Is Question Mandatory : No Calculator : None Response Time : N.A Think Time : N.A Minimum Instruction Time : 0

Correct Marks : 5 Wrong Marks : 1

Question Key Details :

Key	Value
Comprehension	MCQ

ഇന്ത്യൻ ഭരണഘടനയുടെ ആർട്ടിക്കിൾ 21A വിദ്യാഭ്യാസത്തിനുള്ള അവകാശവുമായി ബന്ധപ്പെട്ടിരിക്കുന്നു. ഏതാമത്തെ ഭരണഘടനാ ഭേദഗതി പ്രകാരമാണ് ഈ ആർട്ടിക്കിൾ കൂട്ടിച്ചേർക്കപ്പെട്ടത് ?

- (1) 42nd
- (2) 44th
- (3) 96th
- (4) 86th

Options :

- 212807119033 1
- 212807119034 2
- 212807119035 3
- 212807119036 4

Question Number : 274 Question Id : 21280719759 Question Type : MCQ Option Shuffling : No Is Question Mandatory : No Calculator : None Response Time : N.A Think Time : N.A Minimum Instruction Time : 0

Correct Marks : 5 Wrong Marks : 1

Question Key Details :

Key	Value
Comprehension	MCQ

ଓଡ଼ିଶାରେ ଅନୁଚ୍ଛେଦ 21A ଭିତ୍ତରେ ଅଧିକାରକୁ ବ୍ୟାପ୍ୟ କରେ । କେଉଁ ଓଡ଼ିଶାରେ ସଂଶୋଧନ ଅନୁସାରେ ଏହି ଅନୁଚ୍ଛେଦକୁ ପୁରା ପାଇଁ ?

- (1) 42 ଚଳ
- (2) 44 ଚଳ
- (3) 96 ଚଳ
- (4) 86 ଚଳ

భారత రాజ్యాంగ ఆర్టికల్ 21 A విద్యా హక్కుని గురించి. కింది ఏ రాజ్యాంగ సవరణ ద్వారా చేర్చబడింది ?

- (1) 42వ
- (2) 44వ
- (3) 96వ
- (4) 86వ

Options :

- 212907119033 1
- 212907119034 2
- 212907119035 3
- 212907119036 4

Question Number : 274 Question Id : 21280729759 Question Type : MCQ Option Shuffling : No Is Question Mandatory : No Calculator : None
Response Time : N.A Think Time : N.A Minimum Instruction Time : 0

Correct Marks : 5 Wrong Marks : 1

Question Key Details :

Key	Value
Comprehension	MCQ

دستور ہند کا آرٹیکل 21 A جن تعلیم سے متعلق ہے اس آرٹیکل کو کس ترمیم کے ذریعے دستور میں ڈالا گیا ہے ؟

- (1) 42 ویں
- (2) 44 ویں
- (3) 96 ویں
- (4) 86 ویں

Options :

- 212907119033 1
- 212907119034 2
- 212907119035 3
- 212907119036 4

Question Number : 275 Question Id : 21280729760 Question Type : MCQ Option Shuffling : No Is Question Mandatory : No Calculator : None
Response Time : N.A Think Time : N.A Minimum Instruction Time : 0

Correct Marks : 5 Wrong Marks : 1

Question Key Details :

Key	Value
Comprehension	MCQ

Which constitutional amendment incorporated the fundamental duties in the constitution of India ?

- (1) 41st
- (2) 42nd
- (3) 43rd
- (4) 44th

Options :

- 212907119037 1
- 212907119038 2
- 212907119039 3
- 212907119040 4

Question Number : 275 Question Id : 21280719760 Question Type : MCQ Option Shuffling : No Is Question Mandatory : No Calculator : None
Response Time : N.A Think Time : N.A Minimum Instruction Time : 0

Correct Marks : 5 Wrong Marks : 1

Question Key Details :

Key	Value
Comprehension	MCQ

निम्नलिखित में से किस संवैधानिक संशोधन ने भारत के संविधान में मूल कर्तव्यों को समावेशित किया था ?

- (1) 41वाँ
- (2) 42वाँ
- (3) 43वाँ
- (4) 44वाँ

Options :

212807119037 1

212807119038 2

212807119039 3

212807119040 4

Question Number : 275 Question Id : 21280719760 Question Type : MCQ Option Shuffling : No Is Question Mandatory : No Calculator : None
Response Time : N.A Think Time : N.A Minimum Instruction Time : 0

Correct Marks : 5 Wrong Marks : 1

Question Key Details :

Key	Value
Comprehension	MCQ

कौनसे संविधान संशोधनीयें भारतीय संविधानमें मौलिक कर्तव्यसमूह अस्तित्वमें करिहिन ?

- (1) 41 तम
- (2) 42 तम
- (3) 43 तम
- (4) 44 तम

Options :

212807119037 1

212807119038 2

212807119039 3

212807119040 4

Question Number : 275 Question Id : 21280719760 Question Type : MCQ Option Shuffling : No Is Question Mandatory : No Calculator : None
Response Time : N.A Think Time : N.A Minimum Instruction Time : 0

Correct Marks : 5 Wrong Marks : 1

Question Key Details :

Key	Value
Comprehension	MCQ

भारतीय संविधानमें मौलिक कर्तव्यसमूहके कौनसे संविधान संशोधनीयें माथामें अस्तित्वमें करा हयैहै ?

- (1) 41 तम
- (2) 42 तम
- (3) 43 तम
- (4) 44 तम

Options :

212807119037 1

212807119038 2

212507119039 3
212507119040 4

Question Number : 175 Question Id : 21280719760 Question Type : MCQ Option Shuffling : No Is Question Mandatory : No Calculator : None
Response Time : N.A Think Time : N.A Minimum Instruction Time : 0
Correct Marks : 5 Wrong Marks : 1

Question Key Details :

Key	Value
Comprehension	MCQ

नीचे आपेलानां(धी कर्ष) बंधारणीय निर्देशील भूणभूत करले छे?

- (1) 41st
- (2) 42nd
- (3) 43rd
- (4) 44th

Options :

212507119039 1
212507119038 2
212507119039 3
212507119040 4

Question Number : 175 Question Id : 21280719760 Question Type : MCQ Option Shuffling : No Is Question Mandatory : No Calculator : None
Response Time : N.A Think Time : N.A Minimum Instruction Time : 0
Correct Marks : 5 Wrong Marks : 1

Question Key Details :

Key	Value
Comprehension	MCQ

ಕೆಳಗಿನವುಗಳಲ್ಲಿ ಯಾವುದು ಸಂವಿಧಾನದ ಮೂಲಭೂತ ಕರ್ತವ್ಯವನ್ನು ಬೋಧಿಸುತ್ತದೆ ?

- (1) 41ನೇ
- (2) 42ನೇ
- (3) 43ನೇ
- (4) 44ನೇ

Options :

212507119039 1
212507119038 2
212507119039 3
212507119040 4

Question Number : 175 Question Id : 21280719760 Question Type : MCQ Option Shuffling : No Is Question Mandatory : No Calculator : None
Response Time : N.A Think Time : N.A Minimum Instruction Time : 0
Correct Marks : 5 Wrong Marks : 1

Question Key Details :

Key	Value
Comprehension	MCQ

कितव्या घटनादुरुस्ती अन्वये राज्य चटनेत मूलभूत कर्तव्यांचा समावेश करण्यात आला ?

- (1) 41^{वीं}
- (2) 42^{वीं}
- (3) 43^{वीं}
- (4) 44^{वीं}

Options :

212507119039 1
212507119038 2

212507119039 3
212507119040 4

Question Number : 275 Question Id : 21250729760 Question Type : MCQ Option Shuffling : No Is Question Mandatory : No Calculator : None
Response Time : N.A Think Time : N.A Minimum Instruction Time : 0
Correct Marks : 5 Wrong Marks : 1

Question Key Details :

Key	Value
Comprehension	MCQ

എത്രമാത്രം ഭരണഘടനാ മരുദന്മാർ പ്രകാരമാണ് നവലിംഗ കർമ്മവൃന്ദങ്ങൾ ഇന്ത്യൻ ഭരണഘടനയിൽ കുടിയേറ്റിക്കപ്പെട്ടത് ?

- (1) 41st
- (2) 42nd
- (3) 43rd
- (4) 44th

Options :

212507119039 1
212507119039 2
212507119039 3
212507119040 4

Question Number : 275 Question Id : 21250729760 Question Type : MCQ Option Shuffling : No Is Question Mandatory : No Calculator : None
Response Time : N.A Think Time : N.A Minimum Instruction Time : 0
Correct Marks : 5 Wrong Marks : 1

Question Key Details :

Key	Value
Comprehension	MCQ

ഭെൻ ബി.ജാൻ ഘോഷലൻ താരതമ്യം നേടിയ കർമ്മവൃന്ദങ്ങൾ എത്രയാണ് ?

- (1) 41 റ്റ
- (2) 42 റ്റ
- (3) 43 റ്റ
- (4) 44 റ്റ

Options :

212507119039 1
212507119039 2
212507119039 3
212507119040 4

Question Number : 275 Question Id : 21250729760 Question Type : MCQ Option Shuffling : No Is Question Mandatory : No Calculator : None
Response Time : N.A Think Time : N.A Minimum Instruction Time : 0
Correct Marks : 5 Wrong Marks : 1

Question Key Details :

Key	Value
Comprehension	MCQ

ਹੇਠ ਲਿਖਿਆ ਵਿੱਚੋਂ ਕਿਹੜਾ ਸੰਵਿਧਾਨਕ ਬੁਨਿਆਦੀ ਕਰਤਵਿੱਚ ਨੂੰ ਨਿਰਦੇਸ਼ਿਤ ਕਰਦਾ ਹੈ?

- (1) 41 ਵਾਂ
- (2) 42 ਵਾਂ
- (3) 43 ਵਾਂ
- (4) 44 ਵਾਂ

Options :

- 212807119037 1
- 212807119038 2
- 212807119039 3
- 212807119040 4

Question Number : 175 Question Id : 21280719760 Question Type : MCQ Option Shuffling : No Is Question Mandatory : No Calculator : None Response Time : N.A Think Time : N.A Minimum Instruction Time : 0

Correct Marks : 5 Wrong Marks : 1

Question Key Details :

Key	Value
Comprehension	MCQ

இந்திய அரசியலமைப்பில் அடிப்படைக் கடமைகளை உள்ளடக்கிய அரசியலமைப்புத் திருத்தம் எது?

- (1) 41st
- (2) 42nd
- (3) 43rd
- (4) 44th

Options :

- 212807119037 1
- 212807119038 2
- 212807119039 3
- 212807119040 4

Question Number : 175 Question Id : 21280719760 Question Type : MCQ Option Shuffling : No Is Question Mandatory : No Calculator : None Response Time : N.A Think Time : N.A Minimum Instruction Time : 0

Correct Marks : 5 Wrong Marks : 1

Question Key Details :

Key	Value
Comprehension	MCQ

કેન્દ્રી વાલીશીલે ષે રાજ્યાંગ સવરણ પ્રાથમિક વેધુલનુ ડેલુકુન્ડી ?

- (1) 41వ
- (2) 42వ
- (3) 43వ
- (4) 44వ

Options :

- 212807119037 1
- 212807119038 2
- 212807119039 3
- 212807119040 4

Question Number : 275 Question Id : 21280719760 Question Type : MCQ Option Shuffling : No Is Question Mandatory : No Calculator : None
Response Time : N.A Think Time : N.A Minimum Instruction Time : 0

Correct Marks : 5 Wrong Marks : 1

Question Key Details :

Key	Value
Comprehension	MCQ

کس دستوری ترمیم کے ذریعہ بنیادی فرائض کو دستور بڑھکا جا رہا ہے ؟

(1) 41 ویں

(2) 42 ویں

(3) 43 ویں

(4) 44 ویں

Options :

212807119037 1

212807119038 2

212807119039 3

212807119040 4

Question Number : 276 Question Id : 21280719761 Question Type : MCQ Option Shuffling : No Is Question Mandatory : No Calculator : None
Response Time : N.A Think Time : N.A Minimum Instruction Time : 0

Correct Marks : 5 Wrong Marks : 1

Question Key Details :

Key	Value
Comprehension	MCQ

How many languages are there in the 8th Schedule of the Indian Constitution ?

(1) 18

(2) 21

(3) 22

(4) 20

Options :

212807119041 1

212807119042 2

212807119043 3

212807119044 4

Question Number : 278 Question Id : 21280719761 Question Type : MCQ Option Shuffling : No Is Question Mandatory : No Calculator : None
Response Time : N.A Think Time : N.A Minimum Instruction Time : 0

Correct Marks : 5 Wrong Marks : 1

Question Key Details :

Key	Value
Comprehension	MCQ

भारतीय संविधान की हवीं अनुसूची में कितनी भाषाएं हैं ?

(1) 18

(2) 21

(3) 22

(4) 20

Options :

212807119041 1

212807119042 2

212807119043 3

212807119044_4

Question Number : 276 Question Id : 21280719761 Question Type : MCQ Option Shuffling : No Is Question Mandatory : No Calculator : None
Response Time : N.A Think Time : N.A Minimum Instruction Time : 0
Correct Marks : 5 Wrong Marks : 1

Question Key Details :

Key	Value
Comprehension	MCQ

ভারতীয় সংবিধানের ৪ নম্বর সূচী মতে কেইটা ভাষা আছে ?

- (1) 18
- (2) 21
- (3) 22
- (4) 20

Options :

212807119041_1
212807119042_2
212807119043_3
212807119044_4

Question Number : 276 Question Id : 21280719761 Question Type : MCQ Option Shuffling : No Is Question Mandatory : No Calculator : None
Response Time : N.A Think Time : N.A Minimum Instruction Time : 0
Correct Marks : 5 Wrong Marks : 1

Question Key Details :

Key	Value
Comprehension	MCQ

ভারতীয় সংবিধানের অষ্টম তালিকায় কতগুলি ভাষা আছে ?

- (1) 18
- (2) 21
- (3) 22
- (4) 20

Options :

212807119041_1
212807119042_2
212807119043_3
212807119044_4

Question Number : 276 Question Id : 21280719761 Question Type : MCQ Option Shuffling : No Is Question Mandatory : No Calculator : None
Response Time : N.A Think Time : N.A Minimum Instruction Time : 0
Correct Marks : 5 Wrong Marks : 1

Question Key Details :

Key	Value
Comprehension	MCQ

ভারতীয় পঞ্চাঙ্গের অনুসূচি ৪ মাঁ ঠেটলী ভাষাখো ঠে?

- (1) 18
- (2) 21
- (3) 22
- (4) 20

Options :

212807119041_1
212807119042_2
212807119043_3
212807119044_4

Question Number : 276 Question Id : 21280719761 Question Type : MCQ Option Shuffling : No Is Question Mandatory : No Calculator : None
Response Time : N.A Think Time : N.A Minimum Instruction Time : 0

Correct Marks : 5 Wrong Marks : 1

Question Key Details :

Key	Value
Comprehension	MCQ

ಭಾರತ ಸಂವಿಧಾನದ 8ನೇ ಶೆಡ್ಯೂಲ್‌ನಲ್ಲಿ ಎಷ್ಟು ಭಾಷೆಗಳಿವೆ ?

- (1) 18
- (2) 21
- (3) 22
- (4) 20

Options :

- 212807119041 1
- 212807119042 2
- 212807119043 3
- 212807119044 4

Question Number : 276 Question Id : 21280719761 Question Type : MCQ Option Shuffling : No Is Question Mandatory : No Calculator : None
Response Time : N.A Think Time : N.A Minimum Instruction Time : 0

Correct Marks : 5 Wrong Marks : 1

Question Key Details :

Key	Value
Comprehension	MCQ

भारतीय राज्य घटनेच्या आठव्या परिशिष्टाल एकूण किती भाषा आहेत?

- (1) 18
- (2) 21
- (3) 22
- (4) 20

Options :

- 212807119041 1
- 212807119042 2
- 212807119043 3
- 212807119044 4

Question Number : 276 Question Id : 21280719761 Question Type : MCQ Option Shuffling : No Is Question Mandatory : No Calculator : None
Response Time : N.A Think Time : N.A Minimum Instruction Time : 0

Correct Marks : 5 Wrong Marks : 1

Question Key Details :

Key	Value
Comprehension	MCQ

ഇന്ത്യൻ അണുഘടനയുടെ 8 -ാം പട്ടികയിൽ എത്ര ഭാഷകളാണ് ഉൾപ്പെടുത്തിയിട്ടുള്ളത് ?

- (1) 18
- (2) 21
- (3) 22
- (4) 20

Options :

- 212807119041 1
- 212807119042 2
- 212807119043 3
- 212807119044 4

Question Number : 176 Question Id : 21280719761 Question Type : MCQ Option Shuffling : No Is Question Mandatory : No Calculator : None
Response Time : N.A Think Time : N.A Minimum Instruction Time : 0

Correct Marks : 5 Wrong Marks : 1

Question Key Details :

Key	Value
Comprehension	MCQ

ଘରର ସମ୍ପୂର୍ଣ୍ଣ ଅଞ୍ଚଳ ଘଣ୍ଟାଘୂରଣର କେତେ ପୁରାଣ ଗଞ୍ଜ ରହିଛି ?

- (1) 18
- (2) 21
- (3) 22
- (4) 20

Options :

212807119041 1

212807119042 2

212807119043 3

212807119044 4

Question Number : 176 Question Id : 21280719761 Question Type : MCQ Option Shuffling : No Is Question Mandatory : No Calculator : None
Response Time : N.A Think Time : N.A Minimum Instruction Time : 0

Correct Marks : 5 Wrong Marks : 1

Question Key Details :

Key	Value
Comprehension	MCQ

ਭਾਰਤ ਦੇ ਅਠਵੇਂ ਸੰਵਿਧਾਨਿਕ ਦਾਂਚੇ ਵਿਚ ਕਿੰਨੀਆਂ ਭਾਸ਼ਾਵਾਂ ਸਨ?

- (1) 18
- (2) 21
- (3) 22
- (4) 20

Options :

212807119041 1

212807119042 2

212807119043 3

212807119044 4

Question Number : 176 Question Id : 21280719761 Question Type : MCQ Option Shuffling : No Is Question Mandatory : No Calculator : None
Response Time : N.A Think Time : N.A Minimum Instruction Time : 0

Correct Marks : 5 Wrong Marks : 1

Question Key Details :

Key	Value
Comprehension	MCQ

இந்திய அரசியலமைப்பின் 8 அட்டவணையில் எத்தனை மொழிகள் உள்ளன?

- (1) 18
- (2) 21
- (3) 22
- (4) 20

Options :

212807119041 1

212807119042 2

212807119043 3

212807119044 4

Question Number : 276 Question Id : 21280729761 Question Type : MCQ Option Shuffling : No Is Question Mandatory : No Calculator : None
Response Time : N.A Think Time : N.A Minimum Instruction Time : 0

Correct Marks : 5 Wrong Marks : 1

Question Key Details :

Key	Value
Comprehension	MCQ

ਫ਼ਾਰਥ ਰਾਜਯੋਗ 8ਵੇਂ ਸੈਕਸ਼ਨ ਵਿੱਚ ਦਿੱਤੀ ਘੋਸ਼ਣਾ ਕੀ ਹੈ ?

- (1) 18
- (2) 21
- (3) 22
- (4) 20

Options :

212807119041 1

212807119042 2

212807119043 3

212807119044 4

Question Number : 276 Question Id : 21280729761 Question Type : MCQ Option Shuffling : No Is Question Mandatory : No Calculator : None
Response Time : N.A Think Time : N.A Minimum Instruction Time : 0

Correct Marks : 5 Wrong Marks : 1

Question Key Details :

Key	Value
Comprehension	MCQ

دستور ہند کی آئینوں میں شیڈول میں کتنی زبانوں کا ذکر ہے ؟

- 18 (1)
- 21 (2)
- 22 (3)
- 20 (4)

Options :

212807119041 1

212807119042 2

212807119043 3

212807119044 4

Question Number : 277 Question Id : 21280729762 Question Type : MCQ Option Shuffling : No Is Question Mandatory : No Calculator : None
Response Time : N.A Think Time : N.A Minimum Instruction Time : 0

Correct Marks : 5 Wrong Marks : 1

Question Key Details :

Key	Value
Comprehension	MCQ

Who has written the book "Gitanjali" ?

- (1) Premchand
- (2) Sharad Chand Chattopadyay
- (3) Rabindranath Tagore
- (4) Mahatma Gandhi

Options :

212807119041 1

212807119042 2

212507119047.3
212507119048.4

Question Number : 277 Question Id : 21250729762 Question Type : MCQ Option Shuffling : No Is Question Mandatory : No Calculator : None
Response Time : N.A Think Time : N.A Minimum Instruction Time : 0
Correct Marks : 5 Wrong Marks : 1

Question Key Details :

Key	Value
Comprehension	MCQ

“गीतांजलि” पुस्तक का लेखक कौन है ?

- (1) प्रेमचंद
- (2) शरद चंद्र चट्टोपाध्याय
- (3) रवीन्द्र नाथ टैगोर
- (4) महात्मा गाँधी

Options :

212507119045.1
212507119046.2
212507119047.3
212507119048.4

Question Number : 277 Question Id : 21250729762 Question Type : MCQ Option Shuffling : No Is Question Mandatory : No Calculator : None
Response Time : N.A Think Time : N.A Minimum Instruction Time : 0

Correct Marks : 5 Wrong Marks : 1

Question Key Details :

Key	Value
Comprehension	MCQ

“गीतांजलि” कित्तापवन कोने लिबिद्धिले ?

- (1) प्रेमचंद
- (2) शरद चंद्र चट्टोपाध्याय
- (3) रवीन्द्रनाथ ठाकुर
- (4) महात्मा गाँधी

Options :

212507119045.1
212507119046.2
212507119047.3
212507119048.4

Question Number : 277 Question Id : 21250729762 Question Type : MCQ Option Shuffling : No Is Question Mandatory : No Calculator : None
Response Time : N.A Think Time : N.A Minimum Instruction Time : 0

Correct Marks : 5 Wrong Marks : 1

Question Key Details :

Key	Value
Comprehension	MCQ

“गीतांजलि” कइति के लिख्छेन ?

- (1) प्रेमचंद
- (2) शरद चंद्र चट्टोपाध्याय
- (3) रवीन्द्रनाथ ठाकुर
- (4) महात्मा गाँधी

Options :

- 212807119045 1
- 212807119046 2
- 212807119047 3
- 212807119048 4

Question Number : 277 Question Id : 21280729762 Question Type : MCQ Option Shuffling : No Is Question Mandatory : No Calculator : None
Response Time : N.A Think Time : N.A Minimum Instruction Time : 0

Correct Marks : 5 Wrong Marks : 1

Question Key Details :

Key	Value
Comprehension	MCQ

“गीतगोवली” (“Gitanjali”) पुस्तक कोसे कानी हली?

- (1) प्रेमचंद
- (2) शरदचंद्र अड्डापाठ्याय
- (3) रविन्द्रनाथ टागोर
- (4) महात्मा गांधी

Options :

- 212807119045 1
- 212807119046 2
- 212807119047 3
- 212807119048 4

Question Number : 277 Question Id : 21280729762 Question Type : MCQ Option Shuffling : No Is Question Mandatory : No Calculator : None
Response Time : N.A Think Time : N.A Minimum Instruction Time : 0

Correct Marks : 5 Wrong Marks : 1

Question Key Details :

Key	Value
Comprehension	MCQ

‘गिरजाबली’ पुस्तककान्नी बरिदकवतु क्कारु ?

- (1) प्रेमचंद
- (2) शरदचंद्र अड्डापाठ्याय
- (3) रविन्द्रनाथ टागोर
- (4) महात्मा गांधी

Options :

- 212807119045 1
- 212807119046 2
- 212807119047 3
- 212807119048 4

Question Number : 277 Question Id : 21280729762 Question Type : MCQ Option Shuffling : No Is Question Mandatory : No Calculator : None
Response Time : N.A Think Time : N.A Minimum Instruction Time : 0

Correct Marks : 5 Wrong Marks : 1

Question Key Details :

Key	Value
Comprehension	MCQ

“गितांजली” या पुस्तकाने लेखक कोण?

- (1) प्रेमचंद
- (2) शरदचंद खटीपाध्ये
- (3) रवींद्रनाथ टागोर
- (4) महात्मा गांधी

Options :

- 212807119045 1
212807119046 2
212807119047 3
212807119048 4

Question Number : 277 Question Id : 21280729762 Question Type : MCQ Option Shuffling : No Is Question Mandatory : No Calculator : None

Response Time : N.A Think Time : N.A Minimum Instruction Time : 0

Correct Marks : 5 Wrong Marks : 1

Question Key Details :

Key	Value
Comprehension	MCQ

‘गीतांजली’ എന്ന പുസ്തകം എഴുതിയതാരാണ് ?

- (1) പ്രേമചന്ദ
- (2) ശരത് ചന്ദ് ചന്തോപാധ്യായ്
- (3) രവീന്ദ്രനാഥ് ടാഗോർ
- (4) മഹാത്മാ ഗാന്ധി

Options :

- 212807119045 1
212807119046 2
212807119047 3
212807119048 4

Question Number : 277 Question Id : 21280729762 Question Type : MCQ Option Shuffling : No Is Question Mandatory : No Calculator : None

Response Time : N.A Think Time : N.A Minimum Instruction Time : 0

Correct Marks : 5 Wrong Marks : 1

Question Key Details :

Key	Value
Comprehension	MCQ

“ଗୀତାଂଜଳି” ବିଏ ଭଜନା କବିଥିଲେ ?

- (1) ପ୍ରେମଚନ୍ଦ
- (2) ଶରତ ଚନ୍ଦ୍ର ଚନ୍ତୋପାଧ୍ୟାୟ
- (3) ରବୀନ୍ଦ୍ରନାଥ ଟାଗୋର
- (4) ମହାତ୍ମା ଗାନ୍ଧୀ

Options :

- 212807119045 1
212807119046 2
212807119047 3
212807119048 4

Question Number : 277 Question Id : 21280729762 Question Type : MCQ Option Shuffling : No Is Question Mandatory : No Calculator : None

Response Time : N.A Think Time : N.A Minimum Instruction Time : 0

Correct Marks : 5 Wrong Marks : 1

212807119048 4

Question Number : 277 Question Id : 21280729762 Question Type : MCQ Option Shuffling : No Is Question Mandatory : No Calculator : None
Response Time : N.A Think Time : N.A Minimum Instruction Time : 0

Correct Marks : 5 Wrong Marks : 1

Question Key Details :

Key	Value
Comprehension	MCQ

کتاب "گیتا نخلی" کے مصنف کون ہیں ؟

- (1) پریم چند
- (2) شرد چند پو پادھیالے
- (3) رائدر ناتھ نیگور
- (4) میر تقی میر

Options :

212807119045 1

212807119046 2

212807119047 3

212807119048 4

Question Number : 278 Question Id : 21280729763 Question Type : MCQ Option Shuffling : No Is Question Mandatory : No Calculator : None
Response Time : N.A Think Time : N.A Minimum Instruction Time : 0

Correct Marks : 5 Wrong Marks : 1

Question Key Details :

Key	Value
Comprehension	MCQ

Every year the world environment day is celebrated on _____.

- (1) 5th June
- (2) 11th July
- (3) 5th July
- (4) 11th June

Options :

212807119049 1

212807119050 2

212807119051 3

212807119052 4

Question Number : 278 Question Id : 21280729763 Question Type : MCQ Option Shuffling : No Is Question Mandatory : No Calculator : None
Response Time : N.A Think Time : N.A Minimum Instruction Time : 0

Correct Marks : 5 Wrong Marks : 1

Question Key Details :

Key	Value
Comprehension	MCQ

विश्व पर्यावरण दिवस प्रतिवर्ष _____ को मनाया जाता है।

- (1) 5 जून
- (2) 11 जुलाई
- (3) 5 जुलाई
- (4) 11 जून

Options :

212807119049 1
212807119050 2
212807119051 3
212807119052 4

Question Number : 278 Question Id : 21280729763 Question Type : MCQ Option Shuffling : No Is Question Mandatory : No Calculator : None
Response Time : N.A Think Time : N.A Minimum Instruction Time : 0

Correct Marks : 5 Wrong Marks : 1

Question Key Details :

Key	Value
Comprehension	MCQ

প্রত্যেক বছরে বিশ্ব পরিবেশ দিবস হিচাপে _____ দিনটো উদ্‌যাপন করা হয়।

- (1) 5 জুন
- (2) 11 জুলাই
- (3) 5 জুলাই
- (4) 11 জুন

Options :

212807119049 1
212807119050 2
212807119051 3
212807119052 4

Question Number : 278 Question Id : 21280729763 Question Type : MCQ Option Shuffling : No Is Question Mandatory : No Calculator : None
Response Time : N.A Think Time : N.A Minimum Instruction Time : 0

Correct Marks : 5 Wrong Marks : 1

Question Key Details :

Key	Value
Comprehension	MCQ

প্রতিবছর বিশ্ব পরিবেশ দিবস পালিত হয় _____।

- (1) 5 ই জুন
- (2) 11 ই জুলাই
- (3) 5 ই জুলাই
- (4) 11 ই জুন

Options :

212807119049 1
212807119050 2
212807119051 3
212807119052 4

Question Number : 278 Question Id : 21280729763 Question Type : MCQ Option Shuffling : No Is Question Mandatory : No Calculator : None
Response Time : N.A Think Time : N.A Minimum Instruction Time : 0

Correct Marks : 5 Wrong Marks : 1

Question Key Details :

Key	Value
Comprehension	MCQ

દર વર્ષે વિશ્વ પર્યાવરણ દિવસ ઉજવવામાં આવે છે તે _____.

- (1) 5 જુન
- (2) 11 જુલાઈ
- (3) 5 જુલાઈ
- (4) 11 જુન

Options :

112807119049 1
112807119050 2
112807119051 3
112807119052 4

Question Number : 278 Question Id : 21280729763 Question Type : MCQ Option Shuffling : No Is Question Mandatory : No Calculator : None

Response Time : N.A Think Time : N.A Minimum Instruction Time : 0

Correct Marks : 5 Wrong Marks : 1

Question Key Details :

Key	Value
Comprehension	MCQ

એટલે પવનગર ડિસવન્યુ પ્રકૃતિ વર્ષા એન્યુ આકરિસલગુક્રુદે ?

- (1) 5ને જુન
- (2) 11ને જુલૈ
- (3) 5ને જુલૈ
- (4) 11ને જુન

Options :

112807119049 1
112807119050 2
112807119051 3
112807119052 4

Question Number : 278 Question Id : 21280729763 Question Type : MCQ Option Shuffling : No Is Question Mandatory : No Calculator : None

Response Time : N.A Think Time : N.A Minimum Instruction Time : 0

Correct Marks : 5 Wrong Marks : 1

Question Key Details :

Key	Value
Comprehension	MCQ

દરવર્ષી _____ રોજી આગતિક પર્યાવરણ દિન સાજય કેલા જાતો.

- (1) 5 જૂન
- (2) 11 જુલૈ
- (3) 5 જુલૈ
- (4) 11 જૂન

Options :

112807119049 1
112807119050 2
112807119051 3
112807119052 4

Question Number : 278 Question Id : 21280729763 Question Type : MCQ Option Shuffling : No Is Question Mandatory : No Calculator : None

Response Time : N.A Think Time : N.A Minimum Instruction Time : 0

Correct Marks : 5 Wrong Marks : 1

Question Key Details :

Key	Value
Comprehension	MCQ

എല്ലാ വർഷവും മലയാള പരിസ്ഥിതി ദിനമായി ആചരിക്കുന്ന ദിനം ഏത് ?

- (1) ജൂൺ 5
- (2) ജൂലൈ 11
- (3) ജൂലൈ 5
- (4) ജൂൺ 11

Options :

212807119049 : 1
 212807119050 : 2
 212807119051 : 3
 212807119052 : 4

Question Number : 275 Question Id : 21280729763 Question Type : MCQ Option Shuffling : No Is Question Mandatory : No Calculator : None
 Response Time : N.A Think Time : N.A Minimum Instruction Time : 0

Correct Marks : 5 Wrong Marks : 1

Question Key Details :

Key	Value
Comprehension	MCQ

വിഴി പരിഭവേണ ദിവസം പ്രത്യേക കൾ _____ ന്റെ വാക്യ കമ്പോസിഷൻ ।

- (1) 5 കൂൾ
- (2) 11 കൂൾ
- (3) 5 കൂൾ
- (4) 11 കൂൾ

Options :

212807119049 : 1
 212807119050 : 2
 212807119051 : 3
 212807119052 : 4

Question Number : 276 Question Id : 21280729763 Question Type : MCQ Option Shuffling : No Is Question Mandatory : No Calculator : None
 Response Time : N.A Think Time : N.A Minimum Instruction Time : 0

Correct Marks : 5 Wrong Marks : 1

Question Key Details :

Key	Value
Comprehension	MCQ

ਹਰ ਸਾਲ ਵਿਸ਼ਵ ਵਾਤਾਵਰਣ ਦਿਵਸ ਕਦੋਂ ਮਨਾਇਆ ਜਾਂਦਾ ਹੈ :

- (1) 5 ਜੂਨ
- (2) 11 ਜੁਲਾਈ
- (3) 5 ਜੁਲਾਈ
- (4) 11 ਜੂਨ

Options :

212807119049 : 1
 212807119050 : 2
 212807119051 : 3
 212807119052 : 4

Question Number : 275 Question Id : 21280719763 Question Type : MCQ Option Shuffling : No Is Question Mandatory : No Calculator : None
Response Time : N.A Think Time : N.A Minimum Instruction Time : 0

Correct Marks : 5 Wrong Marks : 1

Question Key Details :

Key	Value
Comprehension	MCQ

ஒவ்வொரு ஆண்டும் உலக சுற்றுச்சூழல் தினம் கொண்டாடப்படுகிறது.

- (1) 5th ஜூன்
- (2) 11th ஜூலை
- (3) 5th ஜூலை
- (4) 11th ஜூன்

Options :

212807119049 1

212807119050 2

212807119051 3

212807119052 4

Question Number : 278 Question Id : 21280729763 Question Type : MCQ Option Shuffling : No Is Question Mandatory : No Calculator : None
Response Time : N.A Think Time : N.A Minimum Instruction Time : 0

Correct Marks : 5 Wrong Marks : 1

Question Key Details :

Key	Value
Comprehension	MCQ

ప్రతి సంవత్సరం ప్రపంచ పర్యావరణ దినం ఎప్పుడు జరుపుకుంటారు ?

- (1) జూన్ 5
- (2) జూలై 11
- (3) జూలై 5
- (4) జూన్ 11

Options :

212807119049 1

212807119050 2

212807119051 3

212807119052 4

Question Number : 279 Question Id : 21280729763 Question Type : MCQ Option Shuffling : No Is Question Mandatory : No Calculator : None
Response Time : N.A Think Time : N.A Minimum Instruction Time : 0

Correct Marks : 5 Wrong Marks : 1

Question Key Details :

Key	Value
Comprehension	MCQ

عالمی یوم ہاتھوں پر سال منایا جاتا ہے۔ کو

- (1) 5 جون کو
- (2) 11 ویں جولائی کو
- (3) 5 ویں جولائی کو
- (4) 11 ویں جون

Options :

- 212807119049 1
- 212807119050 2
- 212807119051 3
- 212807119052 4

Question Number : 279 Question Id : 21280729764 Question Type : MCQ Option Shuffling : No Is Question Mandatory : No Calculator : None
Response Time : N.A Think Time : N.A Minimum Instruction Time : 0

Correct Marks : 5 Wrong Marks : 1

Question Key Details :

Key	Value
Comprehension	MCQ

Which Indian monument has found place on the Shanghai Cooperation Organisation's '8 wonders of SCO' list ?

- (1) Taj Mahal
- (2) Statue of Unity
- (3) Ajanta Caves
- (4) Konark Sun Temple

Options :

- 212807119053 1
- 212807119054 2
- 212807119055 3
- 212807119056 4

Question Number : 279 Question Id : 21280729764 Question Type : MCQ Option Shuffling : No Is Question Mandatory : No Calculator : None
Response Time : N.A Think Time : N.A Minimum Instruction Time : 0

Correct Marks : 5 Wrong Marks : 1

Question Key Details :

Key	Value
Comprehension	MCQ

निम्नलिखित में से किस भारतीय स्मारक ने '8 वंडर्स ऑफ एस.सी.ओ. (एस.सी.ओ. के 8 चमत्कार) को सूची में स्थान प्राप्त किया है ?

- (1) ताजमहल
- (2) स्टेच्यु ऑफ यूनिटी
- (3) अजंता की गुफाएं
- (4) कोणार्क सूर्य मंदिर

Options :

- 212807119053 1
- 212807119054 2
- 212807119055 3
- 212807119056 4

Question Number : 279 Question Id : 21280729764 Question Type : MCQ Option Shuffling : No Is Question Mandatory : No Calculator : None
Response Time : N.A Think Time : N.A Minimum Instruction Time : 0

Correct Marks : 5 Wrong Marks : 1

Question Key Details :

Key	Value
Comprehension	MCQ

সাংগ্ৰাহিক সহযোগিতা সংস্থাৰ 'SCO' ৰ ৪টা আশ্চৰ্য্যৰ মাজত ভাৰতৰ কোনটো কীৰ্ত্তিস্তম্ভই স্থান পাইছে ?

- (1) তাজ মহল
- (2) ঐক্যতাৰ মূৰ্ত্তি
- (3) অজন্তা গুহা
- (4) কোনাৰ্কৰ সূৰ্য্য মন্দিৰ

Options :

- 112807119053 1
112807119054 2
112807119055 3
112807119056 4

Question Number : 279 Question Id : 21280729764 Question Type : MCQ Option Shuffling : No Is Question Mandatory : No Calculator : None
Response Time : N.A Think Time : N.A Minimum Instruction Time : 0

Correct Marks : 5 Wrong Marks : 1

Question Key Details :

Key	Value
Comprehension	MCQ

কোন ভাৰতীয় স্মৃতিস্তম্ভ সাংগ্ৰাহিক সহযোগিতা সংস্থাৰ অষ্টম আশ্চৰ্য্য হিচাবে 'SCO' তালিকায় স্থান পেয়েছে ?

- (1) তাজ মহল
- (2) ঐক্যতাৰ মূৰ্ত্তি
- (3) অজন্তা গুহা
- (4) কোনাৰ্কৰ সূৰ্য্য মন্দিৰ

Options :

- 112807119053 1
112807119054 2
112807119055 3
112807119056 4

Question Number : 279 Question Id : 21280729764 Question Type : MCQ Option Shuffling : No Is Question Mandatory : No Calculator : None
Response Time : N.A Think Time : N.A Minimum Instruction Time : 0

Correct Marks : 5 Wrong Marks : 1

Question Key Details :

Key	Value
Comprehension	MCQ

ধ্ৰুৱাৰ আৱিষ্কাৰ কৰাৰ পৰা 'SCO' নামৰ আশ্চৰ্য্যবোৰৰ পৰীক্ষা স্থান মন্যু হৈছে ?

- (1) তাজ মহল
- (2) ঐক্যতাৰ মূৰ্ত্তি
- (3) অজন্তা গুহা
- (4) কোনাৰ্কৰ সূৰ্য্য মন্দিৰ

Options :

- 112807119053 1
112807119054 2
112807119055 3
112807119056 4

Question Number : 279 Question Id : 21280729764 Question Type : MCQ Option Shuffling : No Is Question Mandatory : No Calculator : None
Response Time : N.A Think Time : N.A Minimum Instruction Time : 0

Correct Marks : 5 Wrong Marks : 1

Question Key Details :

Key	Value
Comprehension	MCQ

ಭಾರತದ ಯಾವ ಸ್ಮಾರಕವು ಶಾಂಭೈ ಸಹಕಾರ ಕೂಟದ 'SCO ದ 8 ಆದ್ಯತೆಗಳ' ಪಟ್ಟಿಯಲ್ಲಿ ಜಾಗ ಪಡೆದುಕೊಂಡಿದೆ ?

- (1) ತಾಜ್‌ಮಹಲ್
- (2) ಐಕ್ಯತಾ ಪ್ರತಿಮೆ
- (3) ಅಮಂತ ಗುಡೆಗಳು
- (4) ಕೋನಾರ್ಕ್ ಸೂರ್ಯ ದೇವಸ್ಥಾನ

Options :

- 212807119053 1
212807119054 2
212807119055 3
212807119056 4

Question Number : 279 Question Id : 21280729764 Question Type : MCQ Option Shuffling : No Is Question Mandatory : No Calculator : None
Response Time : N.A Think Time : N.A Minimum Instruction Time : 0

Correct Marks : 5 Wrong Marks : 1

Question Key Details :

Key	Value
Comprehension	MCQ

ಶಾಂಭಾಯ ಕಾರ್ಪೊರೇಶನ್ ಸಂಘಟನೆಯು 8 ಆಶ್ಚರ್ಯಗಳನ್ನು ಘಡಿಸಿ ಭಾರತದಲ್ಲಿ ಕೊಂಠಿ ವಾಸ್ತುಗಳಿಗೆ ಸಮರ್ಪಣೆ ಮಾಡುತ್ತಿರುವುದು ಯಾವುದು ?

- (1) ತಾಜ್‌ಮಹಲ್
- (2) ಸ್ಟೆಚ್ಯು ಆಫ್ ಯುನಿಟಿ
- (3) ಅಜಂತಾ ಲೆನಿ
- (4) ಕೋನಾರ್ಕ್ ಸೂರ್ಯಮಂದಿರ

Options :

- 212807119053 1
212807119054 2
212807119055 3
212807119056 4

Question Number : 279 Question Id : 21280729764 Question Type : MCQ Option Shuffling : No Is Question Mandatory : No Calculator : None
Response Time : N.A Think Time : N.A Minimum Instruction Time : 0

Correct Marks : 5 Wrong Marks : 1

Question Key Details :

Key	Value
Comprehension	MCQ

ಆಂಜನಾಯಿ ದೇವತೆ - ಅಂಜನಾಯಿ ದೇವತೆಯನ್ನು ಸ್ಮರಿಸಿದಾಗ 8 ವರ್ಷಗಳ ಸುಖವು ದೊರಕುತ್ತದೆ. ಈ ದೇವತೆಯನ್ನು ಸ್ಮರಿಸಲು ಯಾವ ದಿನವು ಸೂಕ್ತವು ?

- (1) ಶುಕ್ರವಾರ
- (2) ಸೋಮವಾರ
- (3) ಅಂಜನ ದೇವತೆ
- (4) ಅಂಜನಾಯಿ ದೇವತೆ

Options :

- 212807119053 1
212807119054 2
212807119055 3
212807119056 4

Question Number : 279 Question Id : 21280719764 Question Type : MCQ Option Shuffling : No Is Question Mandatory : No Calculator : None
Response Time : N.A Think Time : N.A Minimum Instruction Time : 0

Correct Marks : 5 Wrong Marks : 1

Question Key Details :

Key	Value
Comprehension	MCQ

ਕੋਈ ਛਾਹਦਾਸ ਚੂਹੜਾ ਵਾਹਾਜ਼ ਵਰਦੇਹਰ ਬਜ਼ਾਹ SCC ਚਾਠਿਕਾਹ 8 ਠ ਲਾਠਾਹ ਰੂਹੇ ਖ਼ਾਹ ਠਾਠਠੈ ?

- (1) ਚਾਠਠਠਠਠ
- (2) ਲੋਠੂ ਠਠ ਖ਼ੁਠਿਠ
- (3) ਠਠਠ ਠੁਠਾ
- (4) ਠੋਠਠਾਠ ਠੁਠਠ ਠਠਿਠ

Options :

212807119053 1

212807119054 2

212807119055 3

212807119056 4

Question Number : 279 Question Id : 21280719764 Question Type : MCQ Option Shuffling : No Is Question Mandatory : No Calculator : None
Response Time : N.A Think Time : N.A Minimum Instruction Time : 0

Correct Marks : 5 Wrong Marks : 1

Question Key Details :

Key	Value
Comprehension	MCQ

ਸੰਘਾਈ ਸਹਿਯੋਗ ਸੰਗਠਨ 'ਐਸ.ਸੀ.ਓ. ਸੂਚੀ ਦੇ 8 ਅਜੁਬਿਆਂ' ਵਿਚ ਸ਼ਾਮਿਲ ਹੋਣ ਦਾ ਕਿਹੜੇ ਭਾਰਤੀ ਸਮਾਰਕ ਨੂੰ ਸਥਾਨ ਮਿਲਿਆ ਹੈ?

- (1) ਰਾਜ ਮਹਲ
- (2) ਸਟੈਚੂ ਆਫ ਯੂਠਿਠੀ
- (3) ਅਜੰਠਾ ਗੁਠਾ
- (4) ਕੋਠਾਚਕ ਸਠ ਮੰਦਿਰ

Options :

212807119053 1

212807119054 2

212807119055 3

212807119056 4

Question Number : 279 Question Id : 21280719764 Question Type : MCQ Option Shuffling : No Is Question Mandatory : No Calculator : None
Response Time : N.A Think Time : N.A Minimum Instruction Time : 0

Correct Marks : 5 Wrong Marks : 1

Question Key Details :

Key	Value
Comprehension	MCQ

ஷாங்காய் ஒத்துழைப்பு அமைப்பின் 'ஷாங்காய் ஒத்துழைப்பு அமைப்பின் 8 அதிசயங்கள்' பட்டியலில் இடம் பெற்ற இந்திய நினைவுச்சின்னம் எது?

- (1) தாஜ்மஹால்
- (2) ஒற்றுமைச் சிலை
- (3) அஜந்தா குகைகள்
- (4) கொனார்ட் சூரியன் கோயில்

Options :

- 212807119053 1
212807119054 2
212807119055 3
212807119056 4

Question Number : 279 Question Id : 21280719764 Question Type : MCQ Option Shuffling : No Is Question Mandatory : No Calculator : None Response Time : N.A Think Time : N.A Minimum Instruction Time : 0

Correct Marks : 5 Wrong Marks : 1

Question Key Details :

Key	Value
Comprehension	MCQ

షాంగాయ్ కాప్టరేషన్ అర్గనైజేషన్ యొక్క SCQ 8 వింతల జాబితాలో ఏ భారత కట్టడం వోలు దక్కించుకుంది ?

- (1) తాజ్మహల్
- (2) స్టాచ్యూ ఆఫ్ యునిటీ
- (3) అజంతా గుహలు
- (4) కోణార్క్ సూర్య దేవాలయం

Options :

- 212807119053 1
212807119054 2
212807119055 3
212807119056 4

Question Number : 279 Question Id : 21280719764 Question Type : MCQ Option Shuffling : No Is Question Mandatory : No Calculator : None Response Time : N.A Think Time : N.A Minimum Instruction Time : 0

Correct Marks : 5 Wrong Marks : 1

Question Key Details :

Key	Value
Comprehension	MCQ

شکھائی کو آپریشن آرگنائزیشن کی آٹھ مجموعی کی اسٹ میں کس ہندوستانی آثار قدیمہ کو جگہ ملی ہے ؟

- (1) تاج محل
- (2) اسٹو آف یونٹی
- (3) اجنتا کے غار
- (4) کوہرک من مہل

Options :

- 212807119053 1
212807119054 2

212507119053-3
212507119056-4

Question Number : 250 Question Id : 21250719765 Question Type : MCQ Option Shuffling : No Is Question Mandatory : No Calculator : None
Response Time : N.A Think Time : N.A Minimum Instruction Time : 0

Correct Marks : 5 Wrong Marks : 1

Question Key Details :

Key	Value
Comprehension	MCQ

Which Veda is the oldest Veda ?

- (1) Ayurveda
- (2) Rigveda
- (3) Atharv Veda
- (4) Sam Veda

Options :

212507119057-1
212507119053-1
212507119059-3
212507119060-4

Question Number : 250 Question Id : 21250719766 Question Type : MCQ Option Shuffling : No Is Question Mandatory : No Calculator : None
Response Time : N.A Think Time : N.A Minimum Instruction Time : 0

Correct Marks : 5 Wrong Marks : 1

Question Key Details :

Key	Value
Comprehension	MCQ

निम्नलिखित में से कौन-सा वेद प्राचीनतम् वेद है ?

- (1) ऋग्वेद
- (2) अथर्ववेद
- (3) सामवेद
- (4) यजुर्वेद

Options :

212507119057-1
212507119053-1
212507119059-3
212507119060-4

Question Number : 250 Question Id : 21250719765 Question Type : MCQ Option Shuffling : No Is Question Mandatory : No Calculator : None
Response Time : N.A Think Time : N.A Minimum Instruction Time : 0

Correct Marks : 5 Wrong Marks : 1

Question Key Details :

Key	Value
Comprehension	MCQ

सकल्लोतकैः पूजनि वेद केनचना ?

- (1) आयुर्वेद
- (2) अथर्ववेद
- (3) अथर्व वेद
- (4) सामि वेद

Options :

212507119057-1

212807119058.1
212807119059.3
212807119060.4

Question Number : 280 Question Id : 21280729765 Question Type : MCQ Option Shuffling : No Is Question Mandatory : No Calculator : None
Response Time : N.A Think Time : N.A Minimum Instruction Time : 0

Correct Marks : 5 Wrong Marks : 1

Question Key Details :

Key	Value
Comprehension	MCQ

ಕೊನೆಯ ವೇದವೆಂದರೆ ಪುರೋನಾ ವೇದ ?

- (1) ಆಯುರ್ವೇದ
- (2) ಶಾಖಾವೇದ
- (3) ಅಥರ್ವ ವೇದ
- (4) ಸಾಮ ವೇದ

Options :

212807119057.1
212807119058.1
212807119059.3
212807119060.4

Question Number : 280 Question Id : 21280729765 Question Type : MCQ Option Shuffling : No Is Question Mandatory : No Calculator : None
Response Time : N.A Think Time : N.A Minimum Instruction Time : 0

Correct Marks : 5 Wrong Marks : 1

Question Key Details :

Key	Value
Comprehension	MCQ

ಶ್ರೀ ವೇದ ಸ್ತೋತ್ರವೆಂದರೆ ?

- (1) ಆಯುರ್ವೇದ
- (2) ಶಾಖಾವೇದ
- (3) ಅಥರ್ವ ವೇದ
- (4) ಸಾಮ ವೇದ

Options :

212807119057.1
212807119058.1
212807119059.3
212807119060.4

Question Number : 280 Question Id : 21280729765 Question Type : MCQ Option Shuffling : No Is Question Mandatory : No Calculator : None
Response Time : N.A Think Time : N.A Minimum Instruction Time : 0

Correct Marks : 5 Wrong Marks : 1

Question Key Details :

Key	Value
Comprehension	MCQ

ಯಾವ ವೇದವು ಅತ್ಯಂತ ಪುರಾತನವಾದುದು ?

- (1) ಆಯುರ್ವೇದ
- (2) ಯಜುರ್ವೇದ
- (3) ಅಥರ್ವವೇದ
- (4) ಸಾಮವೇದ

Options :

- 212807119057 1
- 212807119058 2
- 212807119059 3
- 212807119060 4

Question Number : 230 Question Id : 21280729765 Question Type : MCQ Option Shuffling : No Is Question Mandatory : No Calculator : None
Response Time : N.A Think Time : N.A Minimum Instruction Time : 0

Correct Marks : 5 Wrong Marks : 1

Question Key Details :

Key	Value
Comprehension	MCQ

सर्वात प्राचीन वेद कोणता ?

- (1) आयुर्वेद
- (2) ऋग्वेद
- (3) अथर्ववेद
- (4) सामवेद

Options :

- 212807119057 1
- 212807119058 2
- 212807119059 3
- 212807119060 4

Question Number : 230 Question Id : 21280729765 Question Type : MCQ Option Shuffling : No Is Question Mandatory : No Calculator : None
Response Time : N.A Think Time : N.A Minimum Instruction Time : 0

Correct Marks : 5 Wrong Marks : 1

Question Key Details :

Key	Value
Comprehension	MCQ

എറ്റവും പഴയ വേദം ഏത് ?

- (1) ആയുർവേദം
- (2) ഋഗ് വേദം
- (3) അഥർവ്വ വേദം
- (4) സാമ വേദം

Options :

- 212807119057 1
- 212807119058 2
- 212807119059 3
- 212807119060 4

Question Number : 250 Question Id : 21280729765 Question Type : MCQ Option Shuffling : No Is Question Mandatory : No Calculator : None
Response Time : N.A Think Time : N.A Minimum Instruction Time : 0

Correct Marks : 5 Wrong Marks : 1

Question Key Details :

Key	Value
Comprehension	MCQ

କେଉଁ ଦେଶର ସବୁଠାରୁ ପୁରାତନ ଦେଶ ଅଟେ ?

- (1) ଆଣ୍ଡୋର
- (2) ଭରତେନ୍ଦ
- (3) ଅଥର୍ବ ଦେଶ
- (4) ପାମ୍ପ ଦେଶ

Options :

- 112807119057 1
112807119058 2
112807119059 3
112807119060 4

Question Number : 280 Question Id : 21280729765 Question Type : MCQ Option Shuffling : No Is Question Mandatory : No Calculator : None
Response Time : N.A Think Time : N.A Minimum Instruction Time : 0

Correct Marks : 5 Wrong Marks : 1

Question Key Details :

Key	Value
Comprehension	MCQ

କିପକା ଦେଶ ସବୁ ମୁଁ ପୁରାତନ ଦେଶ ਹੈ ?

- (1) ଅନ୍ଧରଦେଶ
- (2) ବିଗଦେଶ
- (3) ଅଧରଦେଶ
- (4) ମାମ ଦେଶ

Options :

- 112807119057 1
112807119058 2
112807119059 3
112807119060 4

Question Number : 280 Question Id : 21280729765 Question Type : MCQ Option Shuffling : No Is Question Mandatory : No Calculator : None
Response Time : N.A Think Time : N.A Minimum Instruction Time : 0

Correct Marks : 5 Wrong Marks : 1

Question Key Details :

Key	Value
Comprehension	MCQ

ପ୍ରଥମାଧ୍ୟାୟୀୟ ଦେଶତମ୍ ଶତ୍ରୁ ?

- (1) ଅଧିପ୍ରଦେଶ
- (2) Rigveda
- (3) ଅଧିପ୍ରଦେଶ
- (4) ଧର୍ମ ଦେଶ

Options :

- 112807119057 1
112807119058 2
112807119059 3
112807119060 4

Question Number : 280 Question Id : 21280729765 Question Type : MCQ Option Shuffling : No Is Question Mandatory : No Calculator : None
Response Time : N.A Think Time : N.A Minimum Instruction Time : 0

Correct Marks : 5 Wrong Marks : 1

Question Key Details :

Key	Value
Comprehension	MCQ

ఏ వేదం పురాతన వేదం ?

- (1) ఆయుర్వేదం
- (2) ఋగ్వేదం
- (3) అథర్వవేదం
- (4) సామవేదం

Options :

- 212807119057 1
- 212807119058 2
- 212807119059 3
- 212807119060 4

Question Number : 250 Question Id : 21280719765 Question Type : MCQ Option Shuffling : No Is Question Mandatory : No Calculator : None
Response Time : N.A Think Time : N.A Minimum Instruction Time : 0

Correct Marks : 5 Wrong Marks : 1

Question Key Details :

Key	Value
Comprehension	MCQ

سب سے پرانی وید کونسی ہے ؟

- (1) آجروید
- (2) رگ وید
- (3) اتھرووید
- (4) سام وید

Options :

- 212807119057 1
- 212807119058 2
- 212807119059 3
- 212807119060 4

Question Number : 281 Question Id : 21280719766 Question Type : MCQ Option Shuffling : No Is Question Mandatory : No Calculator : None
Response Time : N.A Think Time : N.A Minimum Instruction Time : 0

Correct Marks : 5 Wrong Marks : 1

Question Key Details :

Key	Value
Comprehension	MCQ

Simon Commission Act happened during the term of _____.

- (1) Lord Willigdon
- (2) L. Mountbattern
- (3) Lord Irwin
- (4) Lord Dalhousie

Options :

- 212807119061 1
- 212807119062 2
- 212807119063 3
- 212807119064 4

Question Number : 251 Question Id : 212507119066 Question Type : MCQ Option Shuffling : No Is Question Mandatory : No Calculator : None
Response Time : N.A Think Time : N.A Minimum Instruction Time : 0

Correct Marks : 5 Wrong Marks : 1

Question Key Details :

Key	Value
Comprehension	MCQ

साइमन आयोग अधिनियम _____ के कार्यकाल की घटना है।

- (1) लॉर्ड वेलिंगटन
- (2) लॉर्ड माउंटबेटन
- (3) लॉर्ड इरविन
- (4) लॉर्ड डलहौजी

Options :

212507119061: 1
212507119062: 2
212507119063: 3
212507119064: 4

Question Number : 251 Question Id : 212507119066 Question Type : MCQ Option Shuffling : No Is Question Mandatory : No Calculator : None
Response Time : N.A Think Time : N.A Minimum Instruction Time : 0

Correct Marks : 5 Wrong Marks : 1

Question Key Details :

Key	Value
Comprehension	MCQ

इतिमन कमिशन अधिनियम _____ व कार्यकालत प्रघाटन कवा हैछिल।

- (1) लर्ड डलहौजी
- (2) एल. माउंटबेटन
- (3) लर्ड आइरविन
- (4) लर्ड डेलहौजी

Options :

212507119061: 1
212507119062: 2
212507119063: 3
212507119064: 4

Question Number : 251 Question Id : 212507119066 Question Type : MCQ Option Shuffling : No Is Question Mandatory : No Calculator : None
Response Time : N.A Think Time : N.A Minimum Instruction Time : 0

Correct Marks : 5 Wrong Marks : 1

Question Key Details :

Key	Value
Comprehension	MCQ

कस समये साहिमन कमिशन आइल घटेछिल ?

- (1) लर्ड डलहौजी
- (2) एल. माउंटबेटन
- (3) लर्ड आइरविन
- (4) लर्ड डालहौजी

Options :

212507119061: 1

212807119062 1
212807119063 3
212807119064 4

Question Number : 261 Question Id : 21280729766 Question Type : MCQ Option Shuffling : No Is Question Mandatory : No Calculator : None
Response Time : N.A Think Time : N.A Minimum Instruction Time : 0
Correct Marks : 5 Wrong Marks : 1
Question Key Details :

Key	Value
Comprehension	MCQ

_____ ની મુદત દરમ્યાન સિમોન કમિશન એક્ટ ચર્ચું હતું.

- (1) Lord Willigden
- (2) L. Mountbattern
- (3) Lord Irwin
- (4) Lord Dalhousie

Options :
212807119061 1
212807119062 1
212807119063 3
212807119064 4

Question Number : 261 Question Id : 21280729766 Question Type : MCQ Option Shuffling : No Is Question Mandatory : No Calculator : None
Response Time : N.A Think Time : N.A Minimum Instruction Time : 0
Correct Marks : 5 Wrong Marks : 1
Question Key Details :

Key	Value
Comprehension	MCQ

સૈમન્સ અરેબીયન કામ્પીયુ યમાત અવધીય સંવર્ધનદર્શી જરુગીત ?

- (1) ટાડર્ડ ઇન્ડિંગ્ટન
- (2) ટા. માઉન્ટબાટન
- (3) ટાડર્ડ આર્વિન
- (4) ટાડર્ડ ડાલહોસી

Options :
212807119061 1
212807119062 2
212807119063 3
212807119064 4

Question Number : 261 Question Id : 21280729766 Question Type : MCQ Option Shuffling : No Is Question Mandatory : No Calculator : None
Response Time : N.A Think Time : N.A Minimum Instruction Time : 0
Correct Marks : 5 Wrong Marks : 1
Question Key Details :

Key	Value
Comprehension	MCQ

_____ ચા કાર્યકાલ્કત સાયમન કમિશન ઘટના ઘટલી.

- (1) લોર્ડ વિલિંગ્ટન
- (2) લોર્ડ માઉન્ટબૅટન
- (3) લોર્ડ આર્વિન
- (4) લોર્ડ ડલહૅસી

Options :
212807119061 1

212807119062 : 1
212807119063 : 3
212807119064 : 4

Question Number : 251 Question Id : 21280729766 Question Type : MCQ Option Shuffling : No Is Question Mandatory : No Calculator : None
Response Time : N.A Think Time : N.A Minimum Instruction Time : 0
Correct Marks : 5 Wrong Marks : 1
Question Key Details :

Key	Value
Comprehension	MCQ

സൈമൺ കമ്മീഷൻ ആക്ട് നിലവിൽ വന്നത് ആരുടെ കാലത്താണ് ?

- (1) ലോർഡ് വെല്ലിംഗ്ടൺ
- (2) ലോർഡ് മൗണ്ടബാറ്റൺ
- (3) ലോർഡ് ഇർവിൻ
- (4) ലോർഡ് ഡൽഹൗസി

Options :
212807119061 : 1
212807119062 : 2
212807119063 : 3
212807119064 : 4

Question Number : 251 Question Id : 21280729766 Question Type : MCQ Option Shuffling : No Is Question Mandatory : No Calculator : None
Response Time : N.A Think Time : N.A Minimum Instruction Time : 0
Correct Marks : 5 Wrong Marks : 1
Question Key Details :

Key	Value
Comprehension	MCQ

_____ ക്കു കാര്യകാര്യ നയങ്ങൾ നിശ്ചയിക്കാനും അവയുടെ നടപ്പാക്കലിനും ഉത്തരവ് നൽകി ?

- (1) Lord Willingdon (ലാർഡ് വില്ലിംഗ്ടൺ)
- (2) L. Mounbatten (എൽ. മൗണ്ടബാറ്റൺ)
- (3) Lord Irwin (ലാർഡ് ഇർവിൻ)
- (4) Lord Dalhousie (ലാർഡ് ഡൽഹൗസി)

Options :
212807119061 : 1
212807119062 : 2
212807119063 : 3
212807119064 : 4

Question Number : 251 Question Id : 21280729766 Question Type : MCQ Option Shuffling : No Is Question Mandatory : No Calculator : None
Response Time : N.A Think Time : N.A Minimum Instruction Time : 0
Correct Marks : 5 Wrong Marks : 1
Question Key Details :

Key	Value
Comprehension	MCQ

ਸਾਬੀਮਨ ਬਮਿਸ਼ਨ ਐਕਟ ਕਿਸਦੇ ਕਾਰਜਕਾਲ ਦੌਰਾਨ ਹੋਇਆ ਸੀ :

- (1) ਲਾਰਡ ਵਿਲਿੰਗਡਨ
- (2) ਐਲ. ਮਾਊਂਟਬੈਟਰਨ
- (3) ਲਾਰਡ ਇਰਵਿਨ
- (4) ਲਾਰਡ ਡਲਹੌਜੀ

Options :

- 212507119061 1
212507119062 2
212507119063 3
212507119064 4

Question Number : 281 Question Id : 21250729766 Question Type : MCQ Option Shuffling : No Is Question Mandatory : No Calculator : None
Response Time : N.A Think Time : N.A Minimum Instruction Time : 0

Correct Marks : 5 Wrong Marks : 1

Question Key Details :

Key	Value
Comprehension	MCQ

ਯੋਗਮਯੋਗ ਕਮਿਸ਼ਨ ਦਾ ਸਥਾਪਨਾ _____ ਪ੍ਰਭੂਗੋਪਾਲਕਾਲ ਵਿੱਚ ਹੋਈ ਸੀ।

- (1) ਵਿਲਿੰਗਡਨ ਪੀਰਪੁ
- (2) ਐਲ. ਮਾਊਂਟਬੈਟਰਨ
- (3) ਇਰਵਿਨ ਪੀਰਪੁ
- (4) ਡਲਹੌਜੀ ਪੀਰਪੁ

Options :

- 212507119061 1
212507119062 2
212507119063 3
212507119064 4

Question Number : 281 Question Id : 21250729766 Question Type : MCQ Option Shuffling : No Is Question Mandatory : No Calculator : None
Response Time : N.A Think Time : N.A Minimum Instruction Time : 0

Correct Marks : 5 Wrong Marks : 1

Question Key Details :

Key	Value
Comprehension	MCQ

ਸੋਮਨ ਕਮਿਸ਼ਨ ਦਾ ਸਥਾਪਨਾ _____ ਪ੍ਰਭੂਗੋਪਾਲਕਾਲ ਵਿੱਚ ਹੋਈ ਸੀ ?

- (1) ਲਾਰਡ ਵਿਲਿੰਗਡਨ
- (2) ਐਲ. ਮਾਊਂਟਬੈਟਰਨ
- (3) ਲਾਰਡ ਇਰਵਿਨ
- (4) ਲਾਰਡ ਡਲਹੌਜੀ

Options :

- 212507119061 1
212507119062 2
212507119063 3
212507119064 4

Question Number : 251 Question Id : 21280719766 Question Type : MCQ Option Shuffling : No Is Question Mandatory : No Calculator : None
Response Time : N.A Think Time : N.A Minimum Instruction Time : 0

Correct Marks : 5 Wrong Marks : 1

Question Key Details :

Key	Value
Comprehension	MCQ

سائنس کمیشن ایک واقع ہوا _____ کے زمانے میں۔

(1) ایڈولٹمنٹ

(2) ایڈولٹنٹیشن

(3) ایڈولٹرون

(4) ایڈولٹریزی

Options :

21280719061 1

21280719062 2

21280719063 3

21280719064 4

Question Number : 252 Question Id : 21280719767 Question Type : MCQ Option Shuffling : No Is Question Mandatory : No Calculator : None
Response Time : N.A Think Time : N.A Minimum Instruction Time : 0

Correct Marks : 5 Wrong Marks : 1

Question Key Details :

Key	Value
Comprehension	MCQ

Blue Revolution is related to the production of _____.

(1) Milk

(2) Fish

(3) Oilseeds

(4) Pulses

Options :

21280719065 1

21280719066 2

21280719067 3

21280719068 4

Question Number : 253 Question Id : 21280719767 Question Type : MCQ Option Shuffling : No Is Question Mandatory : No Calculator : None
Response Time : N.A Think Time : N.A Minimum Instruction Time : 0

Correct Marks : 5 Wrong Marks : 1

Question Key Details :

Key	Value
Comprehension	MCQ

नीली क्रांति (ब्ल्यू रिवोल्यूशन) किससे संबंधित है ?

(1) दूध

(2) मछली

(3) तिलहन

(4) चार्ले

Options :

21280719065 1

21280719066 2

212507119067-3
212507119068-4

Question Number : 252 Question Id : 21250719767 Question Type : MCQ Option Shuffling : No Is Question Mandatory : No Calculator : None
Response Time : N.A Think Time : N.A Minimum Instruction Time : 0
Correct Marks : 5 Wrong Marks : 1

Question Key Details :

Key	Value
Comprehension	MCQ

নীল বিপ্লব _____ উৎপাদনকে সৈতে জড়িত।

- (1) পাখীর
- (2) মাছ
- (3) তৈল বীজ
- (4) দালি

Options :

212507119069-1
212507119068-2
212507119067-3
212507119068-4

Question Number : 262 Question Id : 21250729767 Question Type : MCQ Option Shuffling : No Is Question Mandatory : No Calculator : None
Response Time : N.A Think Time : N.A Minimum Instruction Time : 0
Correct Marks : 5 Wrong Marks : 1

Question Key Details :

Key	Value
Comprehension	MCQ

কোন উৎপাদনের সাথে নীল বিপ্লব সম্পর্কিত ?

- (1) দুধ
- (2) মাছ
- (3) তৈল বীজ
- (4) ডাল

Options :

212507119069-1
212507119068-2
212507119067-3
212507119068-4

Question Number : 352 Question Id : 21250719767 Question Type : MCQ Option Shuffling : No Is Question Mandatory : No Calculator : None
Response Time : N.A Think Time : N.A Minimum Instruction Time : 0
Correct Marks : 5 Wrong Marks : 1

Question Key Details :

Key	Value
Comprehension	MCQ

_____ নামে উল্লেখিত নীল বিপ্লবের সাথে সংশ্লিষ্ট (ব্লু রিভোলিউশন) (Blue Revolution) છે.

- (1) દૂધ
- (2) માછલી
- (3) તેલીબિયાં
- (4) ડાળ

Options :

- 212807119063 1
- 212807119065 2
- 212807119067 3
- 212807119068 4

Question Number : 231 Question Id : 21280729767 Question Type : MCQ Option Shuffling : No Is Question Mandatory : No Calculator : None
Response Time : N.A Think Time : N.A Minimum Instruction Time : 0

Correct Marks : 5 Wrong Marks : 1

Question Key Details :

Key	Value
Comprehension	MCQ

ನೀಲಿ ಕ್ರಾಂತಿಯು ಈ ಉತ್ಪನ್ನಕ್ಕೆ ಸಂಬಂಧಿಸಿದ್ದು :

- (1) ಹಾಲು
- (2) ಮೀಸು
- (3) ಎಣ್ಣೆಬೀಜಗಳು
- (4) ದೇಹಕಾಯಗಳು

Options :

- 212807119065 1
- 212807119066 2
- 212807119067 3
- 212807119068 4

Question Number : 232 Question Id : 21280729767 Question Type : MCQ Option Shuffling : No Is Question Mandatory : No Calculator : None
Response Time : N.A Think Time : N.A Minimum Instruction Time : 0

Correct Marks : 5 Wrong Marks : 1

Question Key Details :

Key	Value
Comprehension	MCQ

ನೀಲಕ್ರಾಂತಿ ಹಿ _____ ನ್ನು ಉತ್ಪಾದನಾಶೀ ಸಂಬಂಧಿತ ಆಹೆ.

- (1) ದುಧ
- (2) ಮಲಸು
- (3) ತೆಲಬಿಯಾ
- (4) ಡಾಲ್ಸಿ

Options :

- 212807119063 1
- 212807119065 2
- 212807119067 3
- 212807119068 4

Question Number : 233 Question Id : 21280729767 Question Type : MCQ Option Shuffling : No Is Question Mandatory : No Calculator : None
Response Time : N.A Think Time : N.A Minimum Instruction Time : 0

Correct Marks : 5 Wrong Marks : 1

Question Key Details :

Key	Value
Comprehension	MCQ

നീള വിപ്ലവം എന്തിന്റെ ഉൽപാദനവുമായി ബന്ധപ്പെട്ടിരിക്കുന്നു ?

- (1) പാൽ
- (2) മത്സ്യം
- (3) എണ്ണക്കുരുക്കൾ
- (4) പയർ വർഗ്ഗങ്ങൾ

Options :

212807119065 : 1
212807119066 : 2
212807119067 : 3
212807119068 : 4

Question Number : 252 Question Id : 21280719767 Question Type : MCQ Option Shuffling : No Is Question Mandatory : No Calculator : None
Response Time : N.A Think Time : N.A Minimum Instruction Time : 0

Correct Marks : 5 Wrong Marks : 1

Question Key Details :

Key	Value
Comprehension	MCQ

നാലു ഭിമുര _____ രണ്ടാമതെ വരിക ഒഴികെ ।

- (1) ജിര
- (2) നാജ
- (3) രാജഭിമുര
- (4) ഭിമുര

Options :

212807119065 : 1
212807119066 : 2
212807119067 : 3
212807119068 : 4

Question Number : 252 Question Id : 21280719767 Question Type : MCQ Option Shuffling : No Is Question Mandatory : No Calculator : None
Response Time : N.A Think Time : N.A Minimum Instruction Time : 0

Correct Marks : 5 Wrong Marks : 1

Question Key Details :

Key	Value
Comprehension	MCQ

നീലി വ്യാജി വിമ ഉത്പാദന നാലു മർദ്ദിത റി _____ ?

- (1) ട്വേ
- (2) മേജി
- (3) ഉല റീന
- (4) റാല

Options :

212807119065 : 1
212807119066 : 2
212807119067 : 3
212807119068 : 4

Question Number : 252 Question Id : 21280719767 Question Type : MCQ Option Shuffling : No Is Question Mandatory : No Calculator : None
Response Time : N.A Think Time : N.A Minimum Instruction Time : 0

Correct Marks : 5 Wrong Marks : 1

Question Key Details :

Key	Value
Comprehension	MCQ

நீலப்பூரட்சி என்பது _____ உற்பத்தியுடன் தொடர்புடையது.

- (1) பால்
- (2) மீன்
- (3) எண்ணெய் வித்துக்கள்
- (4) பயறு வகைகள்

Options :

112807119065 1

112807119066 2

112807119067 3

112807119068 4

Question Number : 252 Question Id : 21280729767 Question Type : MCQ Option Shuffling : No Is Question Mandatory : No Calculator : None
Response Time : N.A Think Time : N.A Minimum Instruction Time : 0

Correct Marks : 5 Wrong Marks : 1

Question Key Details :

Key	Value
Comprehension	MCQ

நீல விஷவம் ఏ ఉత్పత్తికి సంబంధించింది ?

- (1) పాలు
- (2) చేపలు
- (3) నూనె గింజలు
- (4) పప్పులు

Options :

112807119065 1

112807119066 2

112807119067 3

112807119068 4

Question Number : 253 Question Id : 21280729767 Question Type : MCQ Option Shuffling : No Is Question Mandatory : No Calculator : None
Response Time : N.A Think Time : N.A Minimum Instruction Time : 0

Correct Marks : 5 Wrong Marks : 1

Question Key Details :

Key	Value
Comprehension	MCQ

نیلو انھما اب _____ کے پیداوار سے تعلق ہے ؟

- (1) دودھ
- (2) مچھلی
- (3) تیل کی جڑ
- (4) مال

Options :

112807119065 1

112807119066 2

212507119067.3
212507119069.4

Question Number : 253 Question Id : 21250719766 Question Type : MCQ Option Shuffling : No Is Question Mandatory : No Calculator : None
Response Time : N.A Think Time : N.A Minimum Instruction Time : 0

Correct Marks : 5 Wrong Marks : 1

Question Key Details :

Key	Value
Comprehension	MCQ

The Place where 'Mohandas Karamchand Gandhi' was kept during 'Quit India Movement' ?

- (1) Almora Jail
- (2) Cellular Jail
- (3) Agha Khan Palace
- (4) Bankura

Options :

212507119069.1
212507119070.2
212507119071.3
212507119072.4

Question Number : 253 Question Id : 21250719766 Question Type : MCQ Option Shuffling : No Is Question Mandatory : No Calculator : None
Response Time : N.A Think Time : N.A Minimum Instruction Time : 0

Correct Marks : 5 Wrong Marks : 1

Question Key Details :

Key	Value
Comprehension	MCQ

'भारत छोड़ो आंदोलन' के दौरान मोहनदास करमचन्द गाँधी को किस स्थान पर रखा गया था ?

- (1) अल्मोड़ा जेल
- (2) सेलुलर जेल
- (3) आगा खान पैलेस
- (4) बांकुरा

Options :

212507119069.1
212507119070.2
212507119071.3
212507119072.4

Question Number : 253 Question Id : 21250719766 Question Type : MCQ Option Shuffling : No Is Question Mandatory : No Calculator : None
Response Time : N.A Think Time : N.A Minimum Instruction Time : 0

Correct Marks : 5 Wrong Marks : 1

Question Key Details :

Key	Value
Comprehension	MCQ

ভারত ত্যাগ আন্দোলনের সময়ত মোহনদাস করমচান্দ গান্ধীক কোন স্থানত রাখা হৈছিল ?

- (1) আলমোড়া জেল
- (2) ছেলুলার জেল
- (3) আগা খান প্রসাদ
- (4) বাংকুরা

Options :

212507119069.1

212507119070.1
212507119071.3
212507119072.4

Question Number : 283 Question Id : 21250729768 Question Type : MCQ Option Shuffling : No Is Question Mandatory : No Calculator : None
Response Time : N.A Think Time : N.A Minimum Instruction Time : 0
Correct Marks : 5 Wrong Marks : 1
Question Key Details :

Key	Value
Comprehension	MCQ

'ভারত ছাড়া আন্দোলন'-এর সময় 'মোহনলাস করমর্ডান থাফী' কে কোন স্থানে রাখা হয়েছিল ?

- (1) আলমোড়া জেল
- (2) সেলুলার জেল
- (3) আগা খান প্যালেস
- (4) বঁকুড়া

Options :
212507119069.1
212507119070.2
212507119071.3
212507119072.4

Question Number : 283 Question Id : 21250729768 Question Type : MCQ Option Shuffling : No Is Question Mandatory : No Calculator : None
Response Time : N.A Think Time : N.A Minimum Instruction Time : 0
Correct Marks : 5 Wrong Marks : 1
Question Key Details :

Key	Value
Comprehension	MCQ

'ভারত छोड़ी आंदोलन' हरम्यान 'गंधीश' ने राफलाभां आप्यां हलां ते स्थण कालावा.

- (1) अलमोरा जेल (Alamora Jail)
- (2) सेल्युलर जेल
- (3) आगा खान महल (Agha Khan Palace)
- (4) बँकुरा (Bankura)

Options :
212507119069.1
212507119070.2
212507119071.3
212507119072.4

Question Number : 283 Question Id : 21250729768 Question Type : MCQ Option Shuffling : No Is Question Mandatory : No Calculator : None
Response Time : N.A Think Time : N.A Minimum Instruction Time : 0
Correct Marks : 5 Wrong Marks : 1
Question Key Details :

Key	Value
Comprehension	MCQ

*ಕ್ರಿಸ್ಟ್ ಇಂಡಿಯಾ ಚಳವಳಿ*ಯ ಸಂದರ್ಭದಲ್ಲಿ ಗಾಂಧೀಜಿಯವರನ್ನು ಎಲ್ಲಿ ಇರಿಸಲಾಗಿತ್ತು ?

- (1) ಅಲೆಕ್ಸೇಂಡರ್ ಬಂಡಿಖಾನೆ
- (2) ಸೆಲ್ಯುಲಾರ್ ಬಂಡಿಖಾನೆ
- (3) ಆಗಾ ಖಾನ್ ಆರಮನೆ
- (4) ಬಂಕೂರ

Options :

- 212807119069-1
- 212807119070-2
- 212807119071-3
- 212807119072-4

Question Number : 233 Question Id : 21280729768 Question Type : MCQ Option Shuffling : No Is Question Mandatory : No Calculator : None
Response Time : N.A Think Time : N.A Minimum Instruction Time : 0

Correct Marks : 5 Wrong Marks : 1

Question Key Details :

Key	Value
Comprehension	MCQ

छोड़ो भारत चळवळी दरम्यान मोहनदास करमचंद गांधी यांना कोटे टेवण्यात आले होते ?

- (1) अलमोरा तुरुंग
- (2) सेल्युलर तुरुंग
- (3) आगाखान पॅलेस
- (4) बंकर

Options :

- 212807119069-1
- 212807119070-2
- 212807119071-3
- 212807119072-4

Question Number : 233 Question Id : 21280729768 Question Type : MCQ Option Shuffling : No Is Question Mandatory : No Calculator : None
Response Time : N.A Think Time : N.A Minimum Instruction Time : 0

Correct Marks : 5 Wrong Marks : 1

Question Key Details :

Key	Value
Comprehension	MCQ

ക്രീറ്റ് ഇന്ത്യ പ്രസ്ഥാനത്തിന്റെ കാലത്ത് മോഹൻദാസ് കരംചന്ദ് ഗാന്ധിയെ പാർപ്പിച്ച സ്ഥലം ഏത് ?

- (1) അൽമോറ ജയിൽ
- (2) സെല്യുലാർ ജയിൽ
- (3) ആഗാഖാൻ പാലസ്
- (4) ബറകൂർ

Options :

- 212807119069-1
- 212807119070-2
- 212807119071-3
- 212807119072-4

Question Number : 233 Question Id : 21280729768 Question Type : MCQ Option Shuffling : No Is Question Mandatory : No Calculator : None
Response Time : N.A Think Time : N.A Minimum Instruction Time : 0

Correct Marks : 5 Wrong Marks : 1

Question Key Details :

Key	Value
Comprehension	MCQ

'ଗାଉଡ଼ ସାବୁ ଆନ୍ଦୋଳନ' ସମୟରେ "ଫୋରମ୍ ଚାପ୍ ଇଉନିଓନ୍ ରାଜ୍ୟ"ରୁ କେଉଁ ସ୍ଥାନରେ ଉଦ୍ଘାଟିତ ହେଲା ?

- (1) ଆଲମୋରା ଜେଲ୍
- (2) ସେଲୁଲାର୍ ଜେଲ୍
- (3) ଆରା ଖାନ ପେଲେସ୍
- (4) ଦାଲୁରା

Options :

- 212807119069 : 1
212807119070 : 2
212807119071 : 3
212807119072 : 4

Question Number : 253 Question Id : 21280729768 Question Type : MCQ Option Shuffling : No Is Question Mandatory : No Calculator : None
Response Time : N.A Think Time : N.A Minimum Instruction Time : 0

Correct Marks : 5 Wrong Marks : 1

Question Key Details :

Key	Value
Comprehension	MCQ

ਉਸ ਸਥਾਨ ਦਾ ਨਾਂ ਦੱਸੋ ਜਿੱਥੇ ਗਾਂਧੀ ਜੀ ਨੂੰ 'ਭਾਰਤ ਛੱਡੋ ਅੰਦੋਲਨ' ਸਮੇਂ ਰੱਖਿਆ ਗਿਆ?

- (1) ਅਲਮੋਰਾ ਜੇਲ
- (2) ਸੈਲੂਲਰ ਜੇਲ
- (3) ਆਖਾ ਖਾਨ ਪੈਲੇਸ
- (4) ਬੰਦੂਰਾ

Options :

- 212807119069 : 1
212807119070 : 2
212807119071 : 3
212807119072 : 4

Question Number : 253 Question Id : 21280729768 Question Type : MCQ Option Shuffling : No Is Question Mandatory : No Calculator : None
Response Time : N.A Think Time : N.A Minimum Instruction Time : 0

Correct Marks : 5 Wrong Marks : 1

Question Key Details :

Key	Value
Comprehension	MCQ

'ਵੇਲਾਂਗੇ ਯੇਨੇ ਵੇਲਾਂਗੇ' 'ਇਯਕਕੱਠਿੰਨ ਪੋਪਾਤੁ 'ਮੋਮਾਕੱਨੱਤਾਓਂ ਕਰੱਮੱਸੱਨੱਠੱ ਕਾਨੱਠਿ' ਠੈਵੱਕੱਕੱਪੱਪੱਠੱ ੂਠੱ?

- (1) ਅਲਮੋਰਾ ਜੇਲ
- (2) ਸੈਲੂਲਰ ਜੇਲ
- (3) ਆਖਾ ਖਾਨ ਪੈਲੇਸ
- (4) ਬੰਦੂਰਾ

Options :

- 212807119069 : 1
212807119070 : 2
212807119071 : 3
212807119072 : 4

Question Number : 253 Question Id : 21280719765 Question Type : MCQ Option Shuffling : No Is Question Mandatory : No Calculator : None
Response Time : N.A Think Time : N.A Minimum Instruction Time : 0

Correct Marks : 5 Wrong Marks : 1

Question Key Details :

Key	Value
Comprehension	MCQ

"క్విట్ ఇండియా ఉద్యమం"లో మోహన్‌దాస్ కరమచంద్ గాంధీ గారిని ఎక్కడ ఉంచారు ?

- (1) అల్మోరా జైలులో
- (2) సెల్బ్యులర్ జైలులో
- (3) అగాఖాన్ ప్యాలస్
- (4) బంకురా

Options :

- 212807119069 1
- 212807119070 2
- 212807119071 3
- 212807119072 4

Question Number : 253 Question Id : 21280719765 Question Type : MCQ Option Shuffling : No Is Question Mandatory : No Calculator : None
Response Time : N.A Think Time : N.A Minimum Instruction Time : 0

Correct Marks : 5 Wrong Marks : 1

Question Key Details :

Key	Value
Comprehension	MCQ

ہندوستان اچھوڑو کر یک کے دور ان موہن داس کرم چند گاندھی کو کہاں رکھا گیا تھا ؟

- (1) آلمورا جیل
- (2) سیلارجیل
- (3) آغا خان جیل
- (4) بانکورا

Options :

- 212807119069 1
- 212807119070 2
- 212807119071 3
- 212807119072 4

Question Number : 254 Question Id : 21280719769 Question Type : MCQ Option Shuffling : No Is Question Mandatory : No Calculator : None
Response Time : N.A Think Time : N.A Minimum Instruction Time : 0

Correct Marks : 5 Wrong Marks : 1

Question Key Details :

Key	Value
Comprehension	MCQ

The first experimental satellite launched by India in 1975 is _____.

- (1) Rohini
- (2) Rohini D1
- (3) Bhaskar II
- (4) Aryabhata

Options :

- 212807119072 1

212507119074 1
212507119075 3
212507119076 4

Question Number : 254 Question Id : 21250729769 Question Type : MCQ Option Shuffling : No Is Question Mandatory : No Calculator : None
Response Time : N.A Think Time : N.A Minimum Instruction Time : 0

Correct Marks : 5 Wrong Marks : 1

Question Key Details :

Key	Value
Comprehension	MCQ

1975 में भारत ने प्रथम प्रयोगात्मक उपग्रह _____ प्रक्षेपित किया था।

- (1) रोहिणी
- (2) रोहिणी-डी I
- (3) भास्कर-II
- (4) आर्याभट्ट

Options :

212507119073 1
212507119074 1
212507119075 3
212507119076 4

Question Number : 254 Question Id : 21250729769 Question Type : MCQ Option Shuffling : No Is Question Mandatory : No Calculator : None
Response Time : N.A Think Time : N.A Minimum Instruction Time : 0

Correct Marks : 5 Wrong Marks : 1

Question Key Details :

Key	Value
Comprehension	MCQ

1975 त भारत ने उल्कापथ कवा परीक्षामूलक उपग्रहको हैजे _____।

- (1) रोहिणी
- (2) रोहिणी II
- (3) भास्कर II
- (4) आर्याभट्ट

Options :

212507119073 1
212507119074 1
212507119075 3
212507119076 4

Question Number : 254 Question Id : 21250729769 Question Type : MCQ Option Shuffling : No Is Question Mandatory : No Calculator : None
Response Time : N.A Think Time : N.A Minimum Instruction Time : 0

Correct Marks : 5 Wrong Marks : 1

Question Key Details :

Key	Value
Comprehension	MCQ

1975 সালে ভারতের প্রথম প্রক্ষেপিত পরীক্ষামূলক উপগ্রহ হল _____।

- (1) রোহিনি
- (2) রোহিনি II
- (3) ভাস্কর II
- (4) আৰ্যভট্ট

Options :

- 112807119073 1
112807119074 2
112807119075 3
112807119076 4

Question Number : 254 Question Id : 21280729769 Question Type : MCQ Option Shuffling : No Is Question Mandatory : No Calculator : None
Response Time : N.A Think Time : N.A Minimum Instruction Time : 0

Correct Marks : 5 Wrong Marks : 1

Question Key Details :

Key	Value
Comprehension	MCQ

1975 માં ભારત વડે પ્રથમ પ્રાયોજિત ઉપગ્રહ પ્રસ્થાપિત (તત્કાલે મુકવામાં) કરવામાં આવ્યો હતો તેનું નામ _____ છે.

- (1) રોહિણી
- (2) રોહિણી D1
- (3) ભાસ્કર II
- (4) આર્યભટ્ટ

Options :

- 112807119073 1
112807119074 2
112807119075 3
112807119076 4

Question Number : 254 Question Id : 21280729769 Question Type : MCQ Option Shuffling : No Is Question Mandatory : No Calculator : None
Response Time : N.A Think Time : N.A Minimum Instruction Time : 0

Correct Marks : 5 Wrong Marks : 1

Question Key Details :

Key	Value
Comprehension	MCQ

ಭಾರತದಿಂದ ಮೊಟ್ಟಮೊದಲು ಹಾರಿಸಲ್ಪಟ್ಟ ಪ್ರಾಯೋಗಿಕ ಸ್ಯಾಟಲೈಟ್‌ನ ಹೆಸರು :

- (1) ರೋಹಿಣಿ
- (2) ರೋಹಿಣಿ D1
- (3) ಭಾಸ್ಕರ್ II
- (4) ಆರ್ಯಭಟ್ಟ

Options :

- 112807119073 1
112807119074 2
112807119075 3
112807119076 4

Question Number : 254 Question Id : 21280729769 Question Type : MCQ Option Shuffling : No Is Question Mandatory : No Calculator : None
Response Time : N.A Think Time : N.A Minimum Instruction Time : 0

Correct Marks : 5 Wrong Marks : 1

Question Key Details :

Key	Value
Comprehension	MCQ

1975 ମଧ୍ୟେ ଭାରତୀୟ ପ୍ରକ୍ଷେପିତ କେଲେଲା ପହିଲା ପ୍ରାଯୋଗିକ ଡକ୍ଟର ମହମ୍ମଦ _____

- (1) ଚୌଧୁରୀ
- (2) ଚୌଧୁରୀ D.I.
- (3) ଭାସ୍କର II
- (4) ଆର୍ଯ୍ୟଭଟ୍ଟ

Options :

- 212807119073 1
212807119074 2
212807119075 3
212807119076 4

Question Number : 384 Question Id : 21280729769 Question Type : MCQ Option Shuffling : No Is Question Mandatory : No Calculator : None Response Time : N.A Think Time : N.A Minimum Instruction Time : 0

Correct Marks : 5 Wrong Marks : 1

Question Key Details :

Key	Value
Comprehension	MCQ

1975 ଠି ଇନ୍ଦ୍ରୀ ଲିକ୍ଷକପିଢ଼ି ଅନ୍ତର୍ଭୁକ୍ତତା ପାଠିକ୍ଷାଣା ଉପାଗ୍ରହର ନାମ ?

- (1) ଚୌଧୁରୀ
- (2) ଚୌଧୁରୀ D.I.
- (3) ଭାସ୍କର II
- (4) ଆର୍ଯ୍ୟଭଟ୍ଟ

Options :

- 212807119073 1
212807119074 2
212807119075 3
212807119076 4

Question Number : 264 Question Id : 21280729769 Question Type : MCQ Option Shuffling : No Is Question Mandatory : No Calculator : None Response Time : N.A Think Time : N.A Minimum Instruction Time : 0

Correct Marks : 5 Wrong Marks : 1

Question Key Details :

Key	Value
Comprehension	MCQ

ପ୍ରଥମ ପରାକ୍ରମିକ ଉପଗ୍ରହ _____ ଭାରତ ଦ୍ୱାରା 1975 ମସିହାରେ ପଠାଗଢ଼ିଥିଲା ?

- (1) ଚୌଧୁରୀ
- (2) ଚୌଧୁରୀ D.I.
- (3) ଭାସ୍କର II
- (4) ଆର୍ଯ୍ୟଭଟ୍ଟ

Options :

- 212807119073 1
212807119074 2
212807119075 3
212807119076 4

1975 లో భారతదేశం చే ప్రయోగించబడిన మొదటి ప్రయోగాత్మక సాటిలైట్ పేరు ?

- (1) రోహిణి
- (2) రోహిణి DI
- (3) ధాస్య II
- (4) కార్యభట్ట

Options :

- 112807119073 1
- 112807119074 2
- 112807119073 3
- 112807119074 4

Question Number : 264 Question Id : 21280729769 Question Type : MCQ Option Shuffling : No Is Question Mandatory : No Calculator : None
Response Time : N.A Think Time : N.A Minimum Instruction Time : 0

Correct Marks : 5 Wrong Marks : 1

Question Key Details :

Key	Value
Comprehension	MCQ

1975 میں ہندوستان نے پہلا تجرباتی سیٹ لائی کیا اس کا نام ہے _____

- (1) روہی
- (2) DI روہی
- (3) بھاسکر II
- (4) آریہ بھٹ

Options :

- 112807119073 1
- 112807119074 2
- 112807119073 3
- 112807119074 4

Question Number : 255 Question Id : 21280729770 Question Type : MCQ Option Shuffling : No Is Question Mandatory : No Calculator : None
Response Time : N.A Think Time : N.A Minimum Instruction Time : 0

Correct Marks : 5 Wrong Marks : 1

Question Key Details :

Key	Value
Comprehension	MCQ

Which of the following is the most electro-negative element ?

- (1) Hydrogen
- (2) Oxygen
- (3) Fluorine
- (4) Nitrogen

Options :

- 112807119077 1
- 112807119078 2
- 112807119079 3
- 112807119080 4

Question Number : 255 Question Id : 21280719770 Question Type : MCQ Option Shuffling : No Is Question Mandatory : No Calculator : None
Response Time : N.A Think Time : N.A Minimum Instruction Time : 0

Correct Marks : 5 Wrong Marks : 1

Question Key Details :

Key	Value
Comprehension	MCQ

নিম্নলিখিত में से कौन सा सर्वाधिक इलेक्ट्रो-नेगेटिव तत्व है ?

- (1) हाइड्रोजन
- (2) ऑक्सीजन
- (3) फ्लोरिन
- (4) नाइट्रोजन

Options :

212807119077-1

212807119078-2

212807119079-3

212807119080-4

Question Number : 265 Question Id : 21280729770 Question Type : MCQ Option Shuffling : No Is Question Mandatory : No Calculator : None
Response Time : N.A Think Time : N.A Minimum Instruction Time : 0

Correct Marks : 5 Wrong Marks : 1

Question Key Details :

Key	Value
Comprehension	MCQ

তলৰ কোনটো অণুইহঁতে বেছি বিদ্যুৎ ঋণাত্মক উপাদান ?

- (1) হাইড্রজেন
- (2) অক্সিজেন
- (3) ফ্লুরিন
- (4) নাইট্রজেন

Options :

212807119077-1

212807119078-2

212807119079-3

212807119080-4

Question Number : 335 Question Id : 21180719770 Question Type : MCQ Option Shuffling : No Is Question Mandatory : No Calculator : None
Response Time : N.A Think Time : N.A Minimum Instruction Time : 0

Correct Marks : 5 Wrong Marks : 1

Question Key Details :

Key	Value
Comprehension	MCQ

নিম্নের কোনটি সবচেয়ে তড়িৎ ঋণাত্মক মৌল ?

- (1) হাইড্রোজেন
- (2) অক্সিজেন
- (3) ফ্লুরিন
- (4) নাইট্রোজেন

Options :

212807119077-1

212807119078-2

212507119079-3
212507119080-4

Question Number : 285 Question Id : 21250719770 Question Type : MCQ Option Shuffling : No Is Question Mandatory : No Calculator : None
Response Time : N.A Think Time : N.A Minimum Instruction Time : 0
Correct Marks : 5 Wrong Marks : 1

Question Key Details :

Key	Value
Comprehension	MCQ

नीचे आपेलामांथी क्यो सीधी वधु विद्युतकलमय ताल्य छे?

- (1) हाईड्रोजन
- (2) ऑक्सिजन
- (3) फ्लोरिन
- (4) नार्कट्रोजन

Options :

212507119077-1
212507119078-2
212507119079-3
212507119080-4

Question Number : 285 Question Id : 21250719770 Question Type : MCQ Option Shuffling : No Is Question Mandatory : No Calculator : None
Response Time : N.A Think Time : N.A Minimum Instruction Time : 0
Correct Marks : 5 Wrong Marks : 1

Question Key Details :

Key	Value
Comprehension	MCQ

ಕೆಳಗಿನವುಗಳಲ್ಲಿ ಯಾವುದು ಅತ್ಯಂತ ವಿದ್ಯುತ್-ಸುರಕ್ಷಿತ ಧಾತು ?

- (1) ಜಲಜನಕ
- (2) ಆವುಜನಕ
- (3) ಫ್ಲೋರ್
- (4) ಸಾರಜನಕ

Options :

212507119077-1
212507119078-2
212507119079-3
212507119080-4

Question Number : 285 Question Id : 21250719770 Question Type : MCQ Option Shuffling : No Is Question Mandatory : No Calculator : None
Response Time : N.A Think Time : N.A Minimum Instruction Time : 0
Correct Marks : 5 Wrong Marks : 1

Question Key Details :

Key	Value
Comprehension	MCQ

पुढीलपैकी कोणता घटक सर्वाधिक विद्युत अपवाहक आहे ?

- (1) हायड्रोजन
- (2) ऑक्सिजन
- (3) फ्लोरिन
- (4) नायट्रोजन

Options :

212807119077:1
212807119078:2
212807119079:3
212807119080:4

Question Number : 235 Question Id : 21280729770 Question Type : MCQ Option Shuffling : No Is Question Mandatory : No Calculator : None
Response Time : N.A Think Time : N.A Minimum Instruction Time : 0

Correct Marks : 5 Wrong Marks : 1

Question Key Details :

Key	Value
Comprehension	MCQ

താഴെ കൊടുത്തിട്ടുള്ളവയിൽ ഏറ്റവും ഇലക്ട്രോ നെഗറ്റീവ് ആയ മൂലകം ഏത് ?

- (1) ഹൈഡ്രജൻ
- (2) ഓക്സിജൻ
- (3) ഫ്ലൂറൈൻ
- (4) നൈട്രജൻ

Options :

212807119077:1
212807119078:2
212807119079:3
212807119080:4

Question Number : 235 Question Id : 21280729770 Question Type : MCQ Option Shuffling : No Is Question Mandatory : No Calculator : None
Response Time : N.A Think Time : N.A Minimum Instruction Time : 0

Correct Marks : 5 Wrong Marks : 1

Question Key Details :

Key	Value
Comprehension	MCQ

റിറ്റ്യോള മേൽ ശുദ്ധ മരൈന്ദ്രോ-സെസെൻഡ്രൂ മവാദൻ ?

- (1) മരൈന്ദ്രോ
- (2) മരൈൻ
- (3) മരൈൻ
- (4) മരൈൻ

Options :

212807119077:1
212807119078:2
212807119079:3
212807119080:4

Question Number : 235 Question Id : 21280729770 Question Type : MCQ Option Shuffling : No Is Question Mandatory : No Calculator : None
Response Time : N.A Think Time : N.A Minimum Instruction Time : 0

Correct Marks : 5 Wrong Marks : 1

Question Key Details :

Key	Value
Comprehension	MCQ

ਹੇਠ ਲਿਖਿਆਂ ਵਿਚੋਂ ਸਭ ਤੋਂ ਵੱਧ ਇਲਕਟ੍ਰੋ ਨਾਕਾਰਜਮਕ ਭੱਜ ਕਿਹੜਾ ਹੈ?

- (1) ਹਾਈਡਰੋਜਨ
- (2) ਆਕਸੀਜਨ
- (3) ਫਲੋਰਾਈਨ
- (4) ਨਾਈਟਰੋਜਨ

Options :

212507119077 1

212507119078 2

212507119079 3

212507119080 4

Question Number : 285 Question Id : 21250729770 Question Type : MCQ Option Shuffling : No Is Question Mandatory : No Calculator : None
Response Time : N.A Think Time : N.A Minimum Instruction Time : 0

Correct Marks : 5 Wrong Marks : 1

Question Key Details :

Key	Value
Comprehension	MCQ

ਪਿੰਨ੍ਹਵਰੁਵਨਵਰੁਹਿਲ ਮਿਠਵੁਮ ਮਿੰਨ ਂਯਿਰੁਮਯਾਹਠੁ ਠਨਿਮਮੁ ਂਠੁ?

- (1) ਠੀਰਠਮ
- (2) ਂਪਿਰਠਮ
- (3) ਠਵੁਠੁਰਿੰਨ
- (4) ਵੋਠੁਠਮ

Options :

212507119077 1

212507119078 2

212507119079 3

212507119080 4

Question Number : 285 Question Id : 21250729770 Question Type : MCQ Option Shuffling : No Is Question Mandatory : No Calculator : None
Response Time : N.A Think Time : N.A Minimum Instruction Time : 0

Correct Marks : 5 Wrong Marks : 1

Question Key Details :

Key	Value
Comprehension	MCQ

ਕੇਰਿ ਵਾਠੀਲੋਂ ਂਦਿ ਅਠੁਠਠ ਵਿਠੁਠੁ-ਠਾਠਾਠੁਠ ਮੁਮਲਠਠ ?

- (1) ਠੁਠੁਠੁਠ
- (2) ਅਠੁਠੁਠ
- (3) ਠੁਠੁਠ
- (4) ਨੁਠੁਠੁਠ

Options :

212507119077 1

212507119078 2

212507119079 3

212507119080 4

Question Number : 255 Question Id : 21280719770 Question Type : MCQ Option Shuffling : No Is Question Mandatory : No Calculator : None
Response Time : N.A Think Time : N.A Minimum Instruction Time : 0

Correct Marks : 5 Wrong Marks : 1

Question Key Details :

Key	Value
Comprehension	MCQ

مندرجہ ذیل میں سے کون سا سب سے زیادہ برقی منتقلی عناصر ہیں؟

(1) ہائڈروجن

(2) آکسیجن

(3) فلورائن

(4) نائٹروجن

Options :

212807119077 3

212807119078 3

212807119079 3

212807119080 4

Question Number : 256 Question Id : 21280729771 Question Type : MCQ Option Shuffling : No Is Question Mandatory : No Calculator : None
Response Time : N.A Think Time : N.A Minimum Instruction Time : 0

Correct Marks : 5 Wrong Marks : 1

Question Key Details :

Key	Value
Comprehension	MCQ

Which human body organ can regrow ?

(1) Liver

(2) Kidney

(3) Lungs

(4) Heart

Options :

212807119081 1

212807119082 2

212807119083 3

212807119084 4

Question Number : 256 Question Id : 21280729771 Question Type : MCQ Option Shuffling : No Is Question Mandatory : No Calculator : None
Response Time : N.A Think Time : N.A Minimum Instruction Time : 0

Correct Marks : 5 Wrong Marks : 1

Question Key Details :

Key	Value
Comprehension	MCQ

मानव शरीर का कौन-सा अंग पुनर्जन्य हो सकता है ?

(1) यकृत

(2) गुदा

(3) फेफड़े

(4) हृदय

Options :

212807119081 1

212807119082 1

212807119083 3

212807119084-4

Question Number : 286 Question Id : 21280729771 Question Type : MCQ Option Shuffling : No Is Question Mandatory : No Calculator : None
Response Time : N.A Think Time : N.A Minimum Instruction Time : 0
Correct Marks : 5 Wrong Marks : 1
Question Key Details :

Key	Value
Comprehension	MCQ

মানব শৰীৰৰ কোনটো অংগ আকৌ বিকশিত হ'ব পাৰে ?

- (1) যকৃত
- (2) বৃক্ক
- (3) হাঁহুকাঁড়
- (4) হৃদপিণ্ড

Options :

212807119081-1
212807119082-2
212807119083-3
212807119084-4

Question Number : 336 Question Id : 21280729771 Question Type : MCQ Option Shuffling : No Is Question Mandatory : No Calculator : None
Response Time : N.A Think Time : N.A Minimum Instruction Time : 0
Correct Marks : 5 Wrong Marks : 1
Question Key Details :

Key	Value
Comprehension	MCQ

মানবদেহেৰ কোন অঙ্গ পুনৰায় বৃদ্ধি কৰতে পাৰে ?

- (1) যকৃত
- (2) বৃক্ক
- (3) ফুসফুস
- (4) হৃদপিণ্ড

Options :

212807119081-1
212807119082-2
212807119083-3
212807119084-4

Question Number : 286 Question Id : 21280729771 Question Type : MCQ Option Shuffling : No Is Question Mandatory : No Calculator : None
Response Time : N.A Think Time : N.A Minimum Instruction Time : 0
Correct Marks : 5 Wrong Marks : 1
Question Key Details :

Key	Value
Comprehension	MCQ

মানব শৰীৰত পুনৰ্জীৱিত অথবা অঁজা নু নাম আৰ্থে।

- (1) যকৃত
- (2) ডিঙনী
- (3) হাঁহুকাঁড়
- (4) হৃদপিণ্ড

Options :

212507119081 1
212507119082 2
212507119083 3
212507119084 4

Question Number : 235 Question Id : 21250719771 Question Type : MCQ Option Shuffling : No Is Question Mandatory : No Calculator : None
Response Time : N.A Think Time : N.A Minimum Instruction Time : 0

Correct Marks : 5 Wrong Marks : 1

Question Key Details :

Key	Value
Comprehension	MCQ

ಮಾನವ ಶರೀರದ ಅಮೂಲನಕವು ಪುನರ್‌ಉತ್ಪತ್ತಿಯಾಗುವುದನ್ನು ಹೆಸರಿಸಿ.

- (1) ವಿಶ್ವಜನಕಾಂಗ
- (2) ಮೂತ್ರಪಿಂಡ
- (3) ಶ್ವಾಸಕೋಶಗಳು
- (4) ಹೃದಯ

Options :

212507119081 1
212507119082 2
212507119083 3
212507119084 4

Question Number : 236 Question Id : 21250719771 Question Type : MCQ Option Shuffling : No Is Question Mandatory : No Calculator : None
Response Time : N.A Think Time : N.A Minimum Instruction Time : 0

Correct Marks : 5 Wrong Marks : 1

Question Key Details :

Key	Value
Comprehension	MCQ

ಮಾನವಿ ಶರೀರಾಚಾ ಕ್ರೋಢತಾ ಅವಯವ ಪುನರ್‌ವಿಕ್ಷಮ ಅಸತೀ ?

- (1) ಸಕೃತ
- (2) ವೃಕ್ಕ (ಕಿಡನೀ)
- (3) ಕುಪಕುಸ
- (4) ಹೃದಯ

Options :

212507119081 1
212507119082 2
212507119083 3
212507119084 4

Question Number : 236 Question Id : 21250719771 Question Type : MCQ Option Shuffling : No Is Question Mandatory : No Calculator : None
Response Time : N.A Think Time : N.A Minimum Instruction Time : 0

Correct Marks : 5 Wrong Marks : 1

Question Key Details :

Key	Value
Comprehension	MCQ

മനുഷ്യ ശരീരത്തിലെ ഏത് അവയവത്തിനാണ് പ്യനക്യജീവനത്തിനുള്ള കഴിവുള്ളത് ?

- (1) കരൾ
- (2) വൃക്ക
- (3) ശ്വാസകോശം
- (4) ഹൃദയം

Options :

212807119081 1
212807119082 2
212807119083 3
212807119084 4

Question Number : 256 Question Id : 21280729771 Question Type : MCQ Option Shuffling : No Is Question Mandatory : No Calculator : None
Response Time : N.A Think Time : N.A Minimum Instruction Time : 0

Correct Marks : 5 Wrong Marks : 1

Question Key Details :

Key	Value
Comprehension	MCQ

ഒരു ദിവസം ഉണ്ടായ വൃഷ്ടിയിൽ ഏതെങ്കിലും ഒരു ദിവസം ?

- (1) മഴ
- (2) മേഘം
- (3) മേഘമുഖം
- (4) മേഘവർഷം

Options :

212807119081 1
212807119082 2
212807119083 3
212807119084 4

Question Number : 256 Question Id : 21280729771 Question Type : MCQ Option Shuffling : No Is Question Mandatory : No Calculator : None
Response Time : N.A Think Time : N.A Minimum Instruction Time : 0

Correct Marks : 5 Wrong Marks : 1

Question Key Details :

Key	Value
Comprehension	MCQ

മനുഷ്യ ശരീരം വിട്ടുപോകാൻ കഴിയുന്ന വിധം വിട്ടുപോകാൻ കഴിയുന്ന വിധം ?

- (1) ലിഫ്റ്റ്
- (2) കിടപ്പുമേശ (ഗ്രാൻഡ്)
- (3) ലിഫ്റ്റ് (ലിഫ്റ്റ്)
- (4) റാഫ്റ്റ് (ലിഫ്റ്റ്)

Options :

212807119081 1
212807119082 2
212807119083 3
212807119084 4

Question Number : 256 Question Id : 21280729771 Question Type : MCQ Option Shuffling : No Is Question Mandatory : No Calculator : None
Response Time : N.A Think Time : N.A Minimum Instruction Time : 0

Correct Marks : 5 Wrong Marks : 1

Question Key Details :

Key	Value
Comprehension	MCQ

எந்த மனித உடல் உறுப்பு மீண்டும் வளரக்கூடியது?

- (1) ஈரற்கூலை
- (2) குண்டிக்காய்
- (3) நுரையீரல்
- (4) நெஞ்சப்பை

Options :

- 212807119081: 1
212807119082: 1
212807119083: 3
212807119084: 4

Question Number : 256 Question Id : 21280729771 Question Type : MCQ Option Shuffling : No Is Question Mandatory : No Calculator : None
Response Time : N.A Think Time : N.A Minimum Instruction Time : 0

Correct Marks : 5 Wrong Marks : 1

Question Key Details :

Key	Value
Comprehension	MCQ

పనరుత్పత్తి చెండు మానవ శరీర అవయవం పేరు ?

- (1) కాలేయం
- (2) మాత్రపిండం
- (3) ఊపిరితిత్తులు
- (4) గుండె

Options :

- 212807119081: 1
212807119082: 1
212807119083: 3
212807119084: 4

Question Number : 256 Question Id : 21280729771 Question Type : MCQ Option Shuffling : No Is Question Mandatory : No Calculator : None
Response Time : N.A Think Time : N.A Minimum Instruction Time : 0

Correct Marks : 5 Wrong Marks : 1

Question Key Details :

Key	Value
Comprehension	MCQ

انسانی جسم کے کس حصے کی دوبارہ نشوونما ہو سکتی ہے ؟

- (1) لیر
- (2) کڈنی
- (3) ہیمپٹرا
- (4) دل

Options :

- 212807119081: 1
212807119082: 3

212507119083 3
212507119084 4

Question Number : 35* Question Id : 21250719772 Question Type : MCQ Option Shuffling : No Is Question Mandatory : No Calculator : None
Response Time : N.A Think Time : N.A Minimum Instruction Time : 0
Correct Marks : 5 Wrong Marks : 1

Question Key Details :

Key	Value
Comprehension	MCQ

SI unit of temperature is _____.

- (1) Kelvin
- (2) Celsius
- (3) Fahrenheit
- (4) Rankine

Options :

212507119083 1
212507119084 2
212507119085 3
212507119086 4

Question Number : 36* Question Id : 21250719772 Question Type : MCQ Option Shuffling : No Is Question Mandatory : No Calculator : None
Response Time : N.A Think Time : N.A Minimum Instruction Time : 0

Correct Marks : 5 Wrong Marks : 1

Question Key Details :

Key	Value
Comprehension	MCQ

तापमान का SI मात्रक क्या है?

- (1) केल्विन
- (2) सेल्सियस
- (3) फारेनहाइट
- (4) रॉन्किन

Options :

212507119085 1
212507119086 2
212507119087 3
212507119088 4

Question Number : 38* Question Id : 21250719772 Question Type : MCQ Option Shuffling : No Is Question Mandatory : No Calculator : None
Response Time : N.A Think Time : N.A Minimum Instruction Time : 0

Correct Marks : 5 Wrong Marks : 1

Question Key Details :

Key	Value
Comprehension	MCQ

উষ্ণতার S.I. একক হৈছে _____।

- (1) কেলভিন
- (2) ডেলচিয়াছ
- (3) ফারেণহাইট
- (4) রেন্কিন

Options :

212507119089 1

212507119086 1
212507119087 3
212507119088 4

Question Number : 285 Question Id : 21250729772 Question Type : MCQ Option Shuffling : No Is Question Mandatory : No Calculator : None
Response Time : N.A Think Time : N.A Minimum Instruction Time : 0

Correct Marks : 5 Wrong Marks : 1

Question Key Details :

Key	Value
Comprehension	MCQ

ಅಪಮಾಹಾರ S.I. ಏಕಕ ಒಲ _____ |

- (1) ಕೆಲವಿನ್
- (2) ಸೆಲನಿಯಸ್
- (3) ಫಾರ್ಗನಹಾಹಿಟ್
- (4) ರ್ಯಾನ್ಕಿನ್

Options :

212507119086 1
212507119087 3
212507119088 4
212507119089 4

Question Number : 287 Question Id : 21250729772 Question Type : MCQ Option Shuffling : No Is Question Mandatory : No Calculator : None
Response Time : N.A Think Time : N.A Minimum Instruction Time : 0

Correct Marks : 5 Wrong Marks : 1

Question Key Details :

Key	Value
Comprehension	MCQ

ಲಾಪಮಾನ ನೆ S.I. ಏಕಕ ಸುಂಠಿ?

- (1) ಕೆಲ್ವಿನ್
- (2) ಸೆಂಟಿಗ್ರಾಡ್
- (3) ಫೆನ್ಹೆಲ್ಟ್
- (4) ರೆನ್ಕಿನ್ (Rankine)

Options :

212507119086 1
212507119087 3
212507119088 4
212507119089 4

Question Number : 288 Question Id : 21250729772 Question Type : MCQ Option Shuffling : No Is Question Mandatory : No Calculator : None
Response Time : N.A Think Time : N.A Minimum Instruction Time : 0

Correct Marks : 5 Wrong Marks : 1

Question Key Details :

Key	Value
Comprehension	MCQ

ಉಷ್ಣತೆಯ S.I. ಅಳತೆ ಮಾರಪನವು :

- (1) ಕೆಲ್ವಿನ್
- (2) ಸೆಂಟಿಗ್ರಾಡ್
- (3) ಫಾರ್ನಹೈಟ್
- (4) ರೆನ್ಕಿನ್

Options :

- 212807119085 1
- 212807119086 2
- 212807119087 3
- 212807119088 4

Question Number : 237 Question Id : 21280729772 Question Type : MCQ Option Shuffling : No Is Question Mandatory : No Calculator : None
Response Time : N.A Think Time : N.A Minimum Instruction Time : 0

Correct Marks : 5 Wrong Marks : 1

Question Key Details :

Key	Value
Comprehension	MCQ

तापमानाचे S.I. एकाक _____ आहे.

- (1) केल्विन
- (2) सेल्सियस
- (3) फॅरेनहाइट
- (4) रेन्किन

Options :

- 212807119085 1
- 212807119086 2
- 212807119087 3
- 212807119088 4

Question Number : 237 Question Id : 21280729772 Question Type : MCQ Option Shuffling : No Is Question Mandatory : No Calculator : None
Response Time : N.A Think Time : N.A Minimum Instruction Time : 0

Correct Marks : 5 Wrong Marks : 1

Question Key Details :

Key	Value
Comprehension	MCQ

ഊഷ്മാവയുടെ എസ്. ഐ. യൂണിറ്റ് ഏത് ?

- (1) കെൽവിൻ
- (2) സെൽഷ്യസ്
- (3) ഫാരൻഹീറ്റ്
- (4) റാങ്കിൻ

Options :

- 212807119085 1
- 212807119086 2
- 212807119087 3
- 212807119088 4

Question Number : 237 Question Id : 21280729772 Question Type : MCQ Option Shuffling : No Is Question Mandatory : No Calculator : None
Response Time : N.A Think Time : N.A Minimum Instruction Time : 0

Correct Marks : 5 Wrong Marks : 1

Question Key Details :

Key	Value
Comprehension	MCQ

ଉତ୍ତରାଳ _____ S.I. ଏକକ ।

- (1) ଚେଲିଜ୍
- (2) ବ୍ୟାଲସିଉସ୍
- (3) ପାଉରୋଲୋଗ୍
- (4) ରାଉଜିଜ୍

Options :

- 212807119085 1
212807119086 2
212807119087 3
212807119088 4

Question Number : 287 Question Id : 21280719772 Question Type : MCQ Option Shuffling : No Is Question Mandatory : No Calculator : None
Response Time : N.A Think Time : N.A Minimum Instruction Time : 0

Correct Marks : 5 Wrong Marks : 1

Question Key Details :

Key	Value
Comprehension	MCQ

S.I. ତାପମାନର ଏକକ କଣ :

- (1) ବୈଲିଜିନ
- (2) ମେଲିସିଆମ
- (3) ହେଟରୋଜିନ
- (4) ହେଟେରୋଜିନ

Options :

- 212807119085 1
212807119086 2
212807119087 3
212807119088 4

Question Number : 287 Question Id : 21280719772 Question Type : MCQ Option Shuffling : No Is Question Mandatory : No Calculator : None
Response Time : N.A Think Time : N.A Minimum Instruction Time : 0

Correct Marks : 5 Wrong Marks : 1

Question Key Details :

Key	Value
Comprehension	MCQ

S.I. ଗୋପନୀୟତା ଏକକ _____ ଅଟେ ।

- (1) Kelvin
- (2) ଧୂଳିଗଣାଏକକ ପ୍ରଦାନ କରାଯାଇଛି
- (3) ପାର୍ଟିକୁଲ୍
- (4) ଡିଗ୍ରୀସିଲ୍

Options :

- 212807119085 1
212807119086 2
212807119087 3
212807119088 4

Question Number : 287 Question Id : 21280719772 Question Type : MCQ Option Shuffling : No Is Question Mandatory : No Calculator : None
Response Time : N.A Think Time : N.A Minimum Instruction Time : 0

Correct Marks : 5 Wrong Marks : 1

Question Key Details :

Key	Value
Comprehension	MCQ

ఉష్ణోగ్రత యొక్క S.I. ప్రమాణం :

- (1) కెల్విన్
- (2) సెల్సియస్
- (3) ఫారన్ హీట్
- (4) ర్యాంకైన్

Options :

112807119083 1
112807119084 2
112807119087 3
112807119088 4

Question Number : 267 Question Id : 21280729772 Question Type : MCQ Option Shuffling : No Is Question Mandatory : No Calculator : None
Response Time : N.A Think Time : N.A Minimum Instruction Time : 0

Correct Marks : 5 Wrong Marks : 1

Question Key Details :

Key	Value
Comprehension	MCQ

؟ ہے _____ S.I کی اکائی

- (1) کیلویں (Kelvin)
- (2) سెल्सियس (Celsius)
- (3) فارن ہائٹ (Fahrenheit)
- (4) رینکائن (Rankine)

Options :

112807119083 1
112807119086 2
112807119087 3
112807119088 4

Question Number : 268 Question Id : 21280729773 Question Type : MCQ Option Shuffling : No Is Question Mandatory : No Calculator : None
Response Time : N.A Think Time : N.A Minimum Instruction Time : 0

Correct Marks : 5 Wrong Marks : 1

Question Key Details :

Key	Value
Comprehension	MCQ

_____ is called the functional unit of kidney.

- (1) Neuron
- (2) Nephridia
- (3) Nephron
- (4) Alveoli

Options :

112807119089 1
112807119090 2
112807119091 3
112807119092 4

Question Number : 288 Question Id : 21280729773 Question Type : MCQ Option Shuffling : No Is Question Mandatory : No Calculator : None
Response Time : N.A Think Time : N.A Minimum Instruction Time : 0

Correct Marks : 5 Wrong Marks : 1

Question Key Details :

Key	Value
Comprehension	MCQ

_____ को गुर्दे की प्रक्रियात्मक इकाई कहा जाता है।

- (1) तंत्रिकाशिका
- (2) नेफ्रीडिया
- (3) नेफ्रोन (बृक्काणु)
- (4) ऐलिवोली

Options :

212807119089: 1
212807119090: 2
212807119091: 3
212807119092: 4

Question Number : 288 Question Id : 21280729773 Question Type : MCQ Option Shuffling : No Is Question Mandatory : No Calculator : None
Response Time : N.A Think Time : N.A Minimum Instruction Time : 0

Correct Marks : 5 Wrong Marks : 1

Question Key Details :

Key	Value
Comprehension	MCQ

_____ का बुझव एटा कार्यकर्त्री एकक बुजि कोवा हय।

- (1) निडिबन
- (2) नेपट्टिडिया
- (3) नेफ्रोन
- (4) एलिवोली

Options :

212807119089: 1
212807119090: 2
212807119091: 3
212807119092: 4

Question Number : 288 Question Id : 21280729773 Question Type : MCQ Option Shuffling : No Is Question Mandatory : No Calculator : None
Response Time : N.A Think Time : N.A Minimum Instruction Time : 0

Correct Marks : 5 Wrong Marks : 1

Question Key Details :

Key	Value
Comprehension	MCQ

बुझेर कार्यकर्त्री एककरके बला हय _____।

- (1) निडिबन
- (2) नेपट्टिडिया
- (3) नेफ्रोन
- (4) अयालिवोली

Options :

212807119089: 1

212507119090 1
212507119091 3
212507119092 4

Question Number : 288 Question Id : 21250729773 Question Type : MCQ Option Shuffling : No Is Question Mandatory : No Calculator : None
Response Time : N.A Think Time : N.A Minimum Instruction Time : 0

Correct Marks : 5 Wrong Marks : 1

Question Key Details :

Key	Value
Comprehension	MCQ

કિડની ના કાર્યકારી ભાગને _____ કહે છે.

- (1) Neuron
- (2) Neptridia
- (3) Nephron
- (4) Alveoli

Options :

212507119089 1
212507119090 1
212507119091 3
212507119092 4

Question Number : 288 Question Id : 21250729773 Question Type : MCQ Option Shuffling : No Is Question Mandatory : No Calculator : None
Response Time : N.A Think Time : N.A Minimum Instruction Time : 0

Correct Marks : 5 Wrong Marks : 1

Question Key Details :

Key	Value
Comprehension	MCQ

_____ અમુ મુદત્ત્વિંદદ ઘટકવેંદુ કલેંયુક્તારે.

- (1) નેફ્રોન
- (2) નેપ્ટ્રિડિયા
- (3) નેફ્રોન
- (4) અલ્વેઓલી

Options :

212507119089 1
212507119090 1
212507119091 3
212507119092 4

Question Number : 288 Question Id : 21250729773 Question Type : MCQ Option Shuffling : No Is Question Mandatory : No Calculator : None
Response Time : N.A Think Time : N.A Minimum Instruction Time : 0

Correct Marks : 5 Wrong Marks : 1

Question Key Details :

Key	Value
Comprehension	MCQ

_____ લા વૃક્કાવે કાર્યાન્વિત ઇકક મ્હળતાત.

- (1) ન્યૂરોન
- (2) નેપ્ટ્રિડિયા
- (3) નેફ્રોન
- (4) અલ્વેઓલી

Options :

212507119089 1

212807119090: 1
212807119091: 3
212807119092: 4

Question Number : 255 Question Id : 21280729773 Question Type : MCQ Option Shuffling : No Is Question Mandatory : No Calculator : None
Response Time : N.A Think Time : N.A Minimum Instruction Time : 0
Correct Marks : 5 Wrong Marks : 1

Question Key Details :

Key	Value
Comprehension	MCQ

കിഡ്നിയുടെ ഫങ്ഷണൽ യൂണിറ്റിന് പറ്റിയുന്ന പേരെന്ത് ?

- (1) ന്യൂറോൺ
- (2) നെപിദ്രിഡിയ
- (3) നെഫ്രോൺ
- (4) ആൽപിയോളി

Options :

212807119089: 1
212807119090: 2
212807119091: 3
212807119092: 4

Question Number : 256 Question Id : 21280729773 Question Type : MCQ Option Shuffling : No Is Question Mandatory : No Calculator : None
Response Time : N.A Think Time : N.A Minimum Instruction Time : 0
Correct Marks : 5 Wrong Marks : 1

Question Key Details :

Key	Value
Comprehension	MCQ

വൃക്കയുടെ ക്ലാസ്സൽ യൂണിറ്റ് _____ യൂണിറ്റാണ്.

- (1) റിബ്ബോൺ
- (2) നെഫ്രിജിബ
- (3) നെഫ്രോൺ
- (4) ലിംഗ്വലിംഗ്

Options :

212807119089: 1
212807119090: 2
212807119091: 3
212807119092: 4

Question Number : 257 Question Id : 21280729773 Question Type : MCQ Option Shuffling : No Is Question Mandatory : No Calculator : None
Response Time : N.A Think Time : N.A Minimum Instruction Time : 0
Correct Marks : 5 Wrong Marks : 1

Question Key Details :

Key	Value
Comprehension	MCQ

ਗੁਰਦੇ ਦਾ ਯੂਨਿਟ ਕਹਿਲਾਉਂਦਾ ਹੈ?

- (1) ਨਿਊਰਾਨ
- (2) ਨੋਪਟਰਿਡੀਆ
- (3) ਨੋਡਰਾਨ
- (4) ਐਲਵਿਉਲੀ

Options :

- 212507119089 1
212507119090 2
212507119091 3
212507119092 4

Question Number : 358 Question Id : 21250719773 Question Type : MCQ Option Shuffling : No Is Question Mandatory : No Calculator : None
Response Time : N.A Think Time : N.A Minimum Instruction Time : 0

Correct Marks : 5 Wrong Marks : 1

Question Key Details :

Key	Value
Comprehension	MCQ

ਜੀਵਾਨੁਕੂਲਤਾ ਦਾ ਸੋਧਲਪਾਦ () ਅਲਗੁ ਜਨੁਰੁ ਅਯੋਗਕੁਪਪੁਕੁਰੁਗੁ.

- (1) ਨਿਊਰਾਨ
- (2) Neptidia
- (3) ਨੋਡਰਾਨ
- (4) ਅਲਵਿਉਲੀ

Options :

- 212507119089 1
212507119090 2
212507119091 3
212507119092 4

Question Number : 358 Question Id : 21250719773 Question Type : MCQ Option Shuffling : No Is Question Mandatory : No Calculator : None
Response Time : N.A Think Time : N.A Minimum Instruction Time : 0

Correct Marks : 5 Wrong Marks : 1

Question Key Details :

Key	Value
Comprehension	MCQ

ਨਿ ਸੁਕੁਰੁਕੁਪਿੰਦੁ ਕੁਰੁਯੁ ਸੁਕੁਸੁਯੁਯੁ ਅੰਦੁਰੁ.

- (1) ਨਿਊਰਾਨ
- (2) ਨੋਪਟਰਿਡੀਆ
- (3) ਨੋਡਰਾਨ
- (4) ਅਲਵਿਉਲੀ

Options :

- 212507119089 1
212507119090 2
212507119091 3
212507119092 4

Question Number : 358 Question Id : 21250719773 Question Type : MCQ Option Shuffling : No Is Question Mandatory : No Calculator : None
Response Time : N.A Think Time : N.A Minimum Instruction Time : 0

Correct Marks : 5 Wrong Marks : 1

Question Key Details :

Key	Value
Comprehension	MCQ

کونکے فی کا عمل اگائی کہا جاتا ہے ؟

(1) نیرون

(2) میٹریڈا

(3) میٹرون

(4) الوائی

Options :

212507119069 1

212507119090 2

212507119091 3

212507119093 4

Question Number : 239 Question Id : 21250729774 Question Type : MCQ Option Shuffling : No Is Question Mandatory : No Calculator : None
Response Time : N.A Think Time : N.A Minimum Instruction Time : 0

Correct Marks : 5 Wrong Marks : 1

Question Key Details :

Key	Value
Comprehension	MCQ

Match List - I with List - II. (Match the Respiratory Organs of Animal)

List - I

List - II

(A) Lungs

(I) Birds

(B) Gills

(II) Insects centipedes

(C) Trachea

(III) Fish

(D) Airsacs

(IV) Mammals

Choose the most appropriate answer from the options given below :

(1) (A)-(I), (B)-(III), (C)-(II), (D)-(IV)

(2) (A)-(IV), (B)-(III), (C)-(I), (D)-(II)

(3) (A)-(III), (B)-(I), (C)-(II), (D)-(IV)

(4) (A)-(IV), (B)-(III), (C)-(II), (D)-(I)

Options :

212507119093 1

212507119094 2

212507119095 3

212507119096 4

Question Number : 239 Question Id : 21250729774 Question Type : MCQ Option Shuffling : No Is Question Mandatory : No Calculator : None
Response Time : N.A Think Time : N.A Minimum Instruction Time : 0

Correct Marks : 5 Wrong Marks : 1

Question Key Details :

Key	Value
Comprehension	MCQ

सूची-I से सूची-II का मिलान कीजिए । (जानवरों के प्रमुख अंगों का मिलान कीजिए ।)

सूची-I

सूची-II

- | | |
|--------------------|---|
| (A) फेफड़े | (I) पक्षी |
| (B) गिल्स (अरपट्ट) | (II) इनसेक्ट्स सेन्टिपेडेस (कीट रातपाद) |
| (C) श्वासनली | (III) मछली |
| (D) वायु कोष | (IV) स्तनधारी |

नीचे दिए गए विकल्पों में से सर्वाधिक उपयुक्त उत्तर का चयन कीजिए :

- (1) (A)-(I), (B)-(III), (C)-(II), (D)-(IV)
- (2) (A)-(IV), (B)-(III), (C)-(I), (D)-(II)
- (3) (A)-(III), (B)-(I), (C)-(II), (D)-(IV)
- (4) (A)-(IV), (B)-(III), (C)-(II), (D)-(I)

Options :

112807119093 1

112807119094 2

112807119095 3

112807119096 4

Question Number : 269 Question Id : 21280729774 Question Type : MCQ Option Shuffling : No Is Question Mandatory : No Calculator : None Response Time : N.A Think Time : N.A Minimum Instruction Time : 0

Correct Marks : 5 Wrong Marks : 1

Question Key Details :

Key	Value
Comprehension	h000

तालिका - I न सैते तालिका - II मिलोवा :

तालिका - I

तालिका - II

- | | |
|----------------|-----------------|
| (A) होठवाँठ | (I) चवाई |
| (B) फूल | (II) शतपदी पतला |
| (C) श्वासनली | (III) माछ |
| (D) वायुन मोना | (IV) उनापारी |

तलत दिया विकल्पसमूहपवा शुद्ध ऊँरवते बाहि उलिओवा :

- (1) (A)-(I), (B)-(III), (C)-(II), (D)-(IV)
- (2) (A)-(IV), (B)-(III), (C)-(I), (D)-(II)
- (3) (A)-(III), (B)-(I), (C)-(II), (D)-(IV)
- (4) (A)-(IV), (B)-(III), (C)-(II), (D)-(I)

Options :

112807119093 1

112807119094 2

112807119095 3

112807119096 4

Question Number : 269 Question Id : 21280729774 Question Type : MCQ Option Shuffling : No Is Question Mandatory : No Calculator : None Response Time : N.A Think Time : N.A Minimum Instruction Time : 0

Correct Marks : 5 Wrong Marks : 1

Question Key Details :

Key	Value
-----	-------

তালিকা I এর সঙ্গে তালিকা II মেলাও : (প্রাণীদের শ্বাস অঙ্গ মেলাও)

তালিকা I

তালিকা II

- | | |
|---------------|------------------|
| (A) ফুসফুস | (I) পাখি |
| (B) ফুলকা | (II) কীট পতংগ |
| (C) শ্বাসনালী | (III) মাছ |
| (D) বায়ু থলি | (IV) স্তন্যপায়ী |

নিম্নলিখিত বিকল্পগুলি থেকে সঠিক উত্তরটি বেছে ন্যো :

- (1) (A)-(I), (B)-(III), (C)-(II), (D)-(IV)
- (2) (A)-(IV), (B)-(III), (C)-(I), (D)-(II)
- (3) (A)-(III), (B)-(I), (C)-(II), (D)-(IV)
- (4) (A)-(IV), (B)-(III), (C)-(II), (D)-(I)

Options :

- 212807119063 1
212807119064 2
212807119065 3
212807119066 4

Question Number : 289 Question Id : 21280719774 Question Type : MCQ Option Shuffling : No Is Question Mandatory : No Calculator : None
Response Time : N.A Think Time : N.A Minimum Instruction Time : 0

Correct Marks : 5 Wrong Marks : 1

Question Key Details :

Key	Value
Comprehension	MCQ

সূচী-I সাথে সূচী-II নে মেডো. প্রাণীઓ না স্বসন অংগো নে মেডো.

সূচী-I

সূচী-II

- | | |
|--------------------------|---------------------|
| (A) ফুসফুস (Lungs) | (I) পাখীઓ Birds |
| (B) গুলি (Gills) | (II) কঁতু মে-টীপীডস |
| (C) শ্বাসনালী (Tracheae) | (III) মাছ |
| (D) বায়ুথলি (Airsacs) | (IV) সস্তন প্রাণীઓ |

নীচে আপোনা বিকল্পोंमांथी साथो ल्वाण पसंद करो.

- (1) (A)-(I), (B)-(III), (C)-(II), (D)-(IV)
- (2) (A)-(IV), (B)-(III), (C)-(I), (D)-(II)
- (3) (A)-(III), (B)-(I), (C)-(II), (D)-(IV)
- (4) (A)-(IV), (B)-(III), (C)-(II), (D)-(I)

Options :

- 212807119063 1
212807119064 2
212807119065 3
212807119066 4

Question Number : 289 Question Id : 21280719774 Question Type : MCQ Option Shuffling : No Is Question Mandatory : No Calculator : None
Response Time : N.A Think Time : N.A Minimum Instruction Time : 0

Correct Marks : 5 Wrong Marks : 1

Question Key Details :

Key	Value
Comprehension	MCQ

ಪಟ್ಟಿ - I ಅನ್ನು ಪಟ್ಟಿ - II ರ ಜೊತೆ ಹೋರಿಸಿ. (ಪ್ರಾಣಿಗಳ ಶ್ವಾಸಾಂಗಗಳನ್ನು ಹೋರಿಸಿ).

ಪಟ್ಟಿ - I

ಪಟ್ಟಿ - II

- | | |
|-----------------|----------------------|
| (A) ಶ್ವಾಸಕೋಶಗಳು | (I) ಪಕ್ಷಿಗಳು |
| (B) ಕಿವಿರುಗಳು | (II) ಕೀಟಗಳು ಶತಪದಿಗಳು |
| (C) ಶ್ವಾಸನಳಕೆ | (III) ಮೀನು |
| (D) ಗಾಳಿಬೀಲಗಳು | (IV) ಸಸ್ತನಿಗಳು |

ಕೆಳಗೆ ನೀಡಿರುವ ಆಯ್ಕೆಗಳಿಂದ ಸರಿಯಾದ ಉತ್ತರವನ್ನು ಆರಿಸಿ.

- (1) (A)-(I), (B)-(III), (C)-(II), (D)-(IV)
- (2) (A)-(IV), (B)-(III), (C)-(I), (D)-(II)
- (3) (A)-(III), (B)-(I), (C)-(II), (D)-(IV)
- (4) (A)-(IV), (B)-(III), (C)-(II), (D)-(I)

Options :

- 212807119093 1
212807119094 2
212807119095 3
212807119096 4

Question Number : 239 Question Id : 21280729774 Question Type : MCQ Option Shuffling : No Is Question Mandatory : No Calculator : None
Response Time : N.A Think Time : N.A Minimum Instruction Time : 0
Correct Marks : 5 Wrong Marks : 1

Question Key Details :

Key	Value
Comprehension	MCQ

ಯಾದಿ - I आणि यಾದी - II जुळवा. (प्राण्यांच्या श्वासोच्छ्वासामाच्या अवयवांच्या जोड्या जुळवा)

यादी - I

यादी - II

- | | |
|----------------|-------------------|
| (A) फुफ्फुस | (I) पक्षी |
| (B) कल्ले | (II) शतपाद कीटक |
| (C) श्वासनलिका | (III) मासे |
| (D) वातकोष | (IV) सस्तन प्राणी |

खालीलपैकी दिलेल्या पर्यायांमधून योग्य पर्याय निवडा :

- (1) (A)-(I), (B)-(III), (C)-(II), (D)-(IV)
- (2) (A)-(IV), (B)-(III), (C)-(I), (D)-(II)
- (3) (A)-(III), (B)-(I), (C)-(II), (D)-(IV)
- (4) (A)-(IV), (B)-(III), (C)-(II), (D)-(I)

Options :

- 212807119093 1
212807119094 2
212807119095 3
212807119096 4

Question Number : 239 Question Id : 21280729774 Question Type : MCQ Option Shuffling : No Is Question Mandatory : No Calculator : None
Response Time : N.A Think Time : N.A Minimum Instruction Time : 0
Correct Marks : 5 Wrong Marks : 1

Question Key Details :

Key	Value
Comprehension	MCQ

പട്ടിക - I ഉം പട്ടിക - II ഉം തമ്മിൽ ചേരുംപടി ചേർക്കുക.
(ജീവികളുടെ ശ്വസന അവയവങ്ങൾ ചേരുംപടി ചേർക്കുക)

പട്ടിക - I

പട്ടിക - II

- | | |
|---------------|----------------------|
| (A) ശ്വാസകോശം | (I) പക്ഷികൾ |
| (B) ചെങ്കിളി | (II) കീടങ്ങൾ, പശുതാര |
| (C) ഭ്രാക്കിയ | (III) മത്സ്യം |
| (D) വായുസഞ്ചി | (IV) സസ്തനികൾ |

താഴെ കൊടുത്തിട്ടുള്ളതിൽ നിന്ന് ശരിയായ ഉത്തരം തിരഞ്ഞെടുത്ത് ഏഴുതുക.

- (1) (A)-(I), (B)-(III), (C)-(II), (D)-(IV)
- (2) (A)-(IV), (B)-(III), (C)-(I), (D)-(II)
- (3) (A)-(III), (B)-(I), (C)-(II), (D)-(IV)
- (4) (A)-(IV), (B)-(III), (C)-(II), (D)-(I)

Options :

- 212807119093 1
- 212807119094 2
- 212807119095 3
- 212807119096 4

Question Number : 259 Question Id : 21280719774 Question Type : MCQ Option Shuffling : No Is Question Mandatory : No Calculator : None
Response Time : N.A Think Time : N.A Minimum Instruction Time : 0
Correct Marks : 5 Wrong Marks : 1
Question Key Details :

Key	Value
Comprehension	MCQ

ഓമിള-I വളർച്ച ഓമിള-II ൽ നിന്നു . (എന്നെ പട്ടണത്തിൽ ഉൾപ്പെടുത്തിയിട്ടുള്ളവയെ തിരഞ്ഞെടുത്ത് എഴുതുക)

ഓമിള-I

ഓമിള-II

- | | |
|---------------|-----------------|
| (A) കുമ്പസാരം | (I) പട്ടണ |
| (B) കുമ്പസാരം | (II) പട്ടണത്തിൽ |
| (C) കുമ്പസാരം | (III) പട്ടണ |
| (D) കുമ്പസാരം | (IV) പട്ടണത്തിൽ |

നിന്നെ തിരഞ്ഞെടുത്ത് എഴുതുക .

- (1) (A)-(I), (B)-(III), (C)-(II), (D)-(IV)
- (2) (A)-(IV), (B)-(III), (C)-(I), (D)-(II)
- (3) (A)-(III), (B)-(I), (C)-(II), (D)-(IV)
- (4) (A)-(IV), (B)-(III), (C)-(II), (D)-(I)

Options :

- 212807119093 1
- 212807119094 2
- 212807119095 3
- 212807119096 4

Question Number : 259 Question Id : 21280719774 Question Type : MCQ Option Shuffling : No Is Question Mandatory : No Calculator : None

Response Time : N.A Think Time : N.A Minimum Instruction Time : 0

Correct Marks : 5 Wrong Marks : 1

Question Key Details :

Key	Value
Comprehension	MCQ

ਮਿਲਾਣ ਕਰੋ ਸੂਚੀ-I ਦਾ ਲਿਸਟ-II ਨਾਲ। (ਜਾਨਵਰ ਦਾ ਸਵਾਸ ਕ੍ਰਿਆ ਸੰਬੰਧ ਅੰਗ ਮੈਚ ਕਰੋ)

ਸੂਚੀ-I

ਸੂਚੀ-II

- | | |
|--------------------|---------------------|
| (A) ਫੇਫੜੇ | (I) ਪੰਛੀ |
| (B) ਗਿੱਲੀਆਂ (ਗਿਲਸ) | (II) ਮੈਂਟੀਪੀਡਸ ਕੀੜੇ |
| (C) ਟ੍ਰੈਚੀਆ | (III) ਮੱਛੀ |
| (D) ਏਅਰਸੈਕ | (IV) ਬਟਧਾਰੀ (ਮੇਮਲਸ) |

ਹੇਠ ਲਿਖਿਆ ਵਿਕਲਪਾਂ ਵਿੱਚ ਸਹੀ ਉੱਤਰ ਦੀ ਚੋਣ ਕਰੋ :

- (1) (A)-(I), (B)-(III), (C)-(II), (D)-(IV)
- (2) (A)-(IV), (B)-(III), (C)-(I), (D)-(II)
- (3) (A)-(III), (B)-(I), (C)-(II), (D)-(IV)
- (4) (A)-(IV), (B)-(III), (C)-(II), (D)-(I)

Options :

212807119093 1

212807119094 1

212807119095 3

212807119096 4

Question Number : 259 Question Id : 21280719774 Question Type : MCQ Option Shuffling : No Is Question Mandatory : No Calculator : None

Response Time : N.A Think Time : N.A Minimum Instruction Time : 0

Correct Marks : 5 Wrong Marks : 1

Question Key Details :

Key	Value
Comprehension	MCQ

ਪੋਸਟੀ ਪੜ੍ਹਿਯਲ - I ਅਣਨ ਪੜ੍ਹਿਯਲ - II (ਖਿਲਙ੍ਰਕੁਕਲੀਨ ਕੁਵਾਸ
ਅ ਯੁਪੁਕੁਙ੍ਰਨ ਓਪੁਕੁਕ)

ਪੜ੍ਹਿਯਲ - I

ਪੜ੍ਹਿਯਲ - II

- | | |
|---------------|----------------------|
| (A) ਨੁਰਾਯੀਰਲ | (I) ਪਠਵੈਕਲ |
| (B) ਕੀਲਲ | (II) ਪੁਚੀਕਲ ਸੋਨੁਪੀਕਲ |
| (C) ਮੁਚਕਕੁਯੁਯ | (III) ਯੀਨ |
| (D) ਓਚਕਕਲ | (IV) ਪਾਠੁਪੜ੍ਹੀਕਲ |

ਕੀਯੋ ਕੋਕਾਠੁਕਕਪੜ੍ਹੀਙ੍ਰਲ ਖਿਰੁਪਪਙ੍ਰਕਲੀਨੀਰੁਠੁਯੀਕਕੁ ਪੋਕੁਠੁਕੁਯੁਯ
ਪਠਿਕੈਲਕੁ ਠੋਕੁਰੁਕੁਯੁਯ:

- (1) (A) (I), (B) (III), (C) (II), (D) (IV)
- (2) (A) (IV), (B) (III), (C) (I), (D) (II)
- (3) (A) (III), (B) (I), (C) (II), (D) (IV)
- (4) (A) (IV), (B) (III), (C) (II), (D) (I)

Options :

212807119093 1

212507119094 1
212507119095 3
212507119096 4

Question Number : 289 Question Id : 21250729774 Question Type : MCQ Option Shuffling : No Is Question Mandatory : No Calculator : None
Response Time : N.A Think Time : N.A Minimum Instruction Time : 0
Correct Marks : 5 Wrong Marks : 1
Question Key Details :

Key	Value
Comprehension	MCQ

జాబితా - I ను జాబితా - II తో సజాతపరచండి :

జాబితా - I

జాబితా - II

- | | |
|-------------------|----------------|
| (A) ఊపిరితిత్తులు | (I) పక్షులు |
| (B) మొప్పలు | (II) కీటకాలు |
| (C) ట్రాకెయ్ | (III) చేప |
| (D) గాలిసంచులు | (IV) క్షీరజాలు |

క్రింది ఇచ్చిన బద్ధికాల నుండి సరైన జవాబు ఎన్నుకోండి :

- (1) (A)-(I), (B)-(III), (C)-(II), (D)-(IV)
- (2) (A)-(IV), (B)-(III), (C)-(I), (D)-(II)
- (3) (A)-(III), (B)-(I), (C)-(II), (D)-(IV)
- (4) (A)-(IV), (B)-(III), (C)-(II), (D)-(I)

Options :
212507119093 1
212507119094 3
212507119095 3
212507119096 4

Question Number : 289 Question Id : 21250729774 Question Type : MCQ Option Shuffling : No Is Question Mandatory : No Calculator : None
Response Time : N.A Think Time : N.A Minimum Instruction Time : 0
Correct Marks : 5 Wrong Marks : 1
Question Key Details :

Key	Value
Comprehension	MCQ

سٹ I کولٹ II سے ملائیں:

سٹ II	سٹ I
(I) پرمٹے	(A) بچپورا
(II) کیرے	(B) گھمرا
(III) چھلی	(C) ٹرکیا
(IV) دودھاری جانور	(D) اڑکیس

مندرجہ ذیل میں سے درست جواب کی نشان دہی کریں:

- (A)-(I), (B)-(III), (C)-(II), (D)-(IV) (1)
(A)-(IV), (B)-(III), (C)-(I), (D)-(II) (2)
(A)-(III), (B)-(I), (C)-(II), (D)-(IV) (3)
(A)-(IV), (B)-(III), (C)-(II), (D)-(I) (4)

Options :

212807119093 1

212807119094 2

212807119095 3

212807119096 4

Question Number : 290 Question Id : 21280719775 Question Type : MCQ Option Shuffling : No Is Question Mandatory : No Calculator : None
Response Time : N.A Think Time : N.A Minimum Instruction Time : 0

Correct Marks : 5 Wrong Marks : 1

Question Key Details :

Key	Value
Comprehension	MCQ

'Mandi dance' is the folk dance of which state ?

- (1) Punjab
(2) Uttar Pradesh
(3) Goa
(4) Rajasthan

Options :

212807119097 1

212807119098 2

212807119099 3

212807119100 4

Question Number : 290 Question Id : 21280719775 Question Type : MCQ Option Shuffling : No Is Question Mandatory : No Calculator : None
Response Time : N.A Think Time : N.A Minimum Instruction Time : 0

Correct Marks : 5 Wrong Marks : 1

Question Key Details :

Key	Value
Comprehension	MCQ

किस राज्य का लोक नृत्य 'मांडी नृत्य' है?

- (1) पंजाब
- (2) उत्तर प्रदेश
- (3) गोवा
- (4) राजस्थान

Options :

112807119097 1
112807119098 2
112807119099 3
112807119100 4

Question Number : 290 Question Id : 21280729775 Question Type : MCQ Option Shuffling : No Is Question Mandatory : No Calculator : None
Response Time : N.A Think Time : N.A Minimum Instruction Time : 0

Correct Marks : 5 Wrong Marks : 1

Question Key Details :

Key	Value
Comprehension	MCQ

'मांडी नृत्य' कौनसे राज्य का लोकनृत्य है ?

- (1) पंजाब
- (2) उत्तर प्रदेश
- (3) गोवा
- (4) राजस्थान

Options :

112807119097 1
112807119098 2
112807119099 3
112807119100 4

Question Number : 290 Question Id : 21280729775 Question Type : MCQ Option Shuffling : No Is Question Mandatory : No Calculator : None
Response Time : N.A Think Time : N.A Minimum Instruction Time : 0

Correct Marks : 5 Wrong Marks : 1

Question Key Details :

Key	Value
Comprehension	MCQ

'मांडी नृत्य' कौनसे राज्य का लोकनृत्य है ?

- (1) पंजाब
- (2) उत्तर प्रदेश
- (3) गोवा
- (4) राजस्थान

Options :

112807119097 1
112807119098 2
112807119099 3
112807119100 4

Question Number : 290 Question Id : 21280729775 Question Type : MCQ Option Shuffling : No Is Question Mandatory : No Calculator : None
Response Time : N.A Think Time : N.A Minimum Instruction Time : 0

Correct Marks : 5 Wrong Marks : 1

Question Key Details :

Key	Value
Comprehension	MCQ

'मंडी नृत्य' ('Mandi dance') એ લોક નૃત્ય છે તે કયા રાજ્યનું છે?

- (1) પંજાબ
- (2) ઉત્તર પ્રદેશ
- (3) ગોવા
- (4) રાજસ્થાન

Options :

- 212807119097 1
212807119098 2
212807119099 3
212807119100 4

Question Number : 290 Question Id : 21280719775 Question Type : MCQ Option Shuffling : No Is Question Mandatory : No Calculator : None
Response Time : N.A Think Time : N.A Minimum Instruction Time : 0

Correct Marks : 5 Wrong Marks : 1

Question Key Details :

Key	Value
Comprehension	MCQ

'મોંઢી નૃત્યવુ' યમાવ વાલ્યુઢ ઝાનપઢ નૃત્ય ?

- (1) પંજાબ
- (2) ઉત્તર પ્રદેશ
- (3) ગોવા
- (4) રાજસ્થાન

Options :

- 212807119097 1
212807119098 2
212807119099 3
212807119100 4

Question Number : 290 Question Id : 21280719775 Question Type : MCQ Option Shuffling : No Is Question Mandatory : No Calculator : None
Response Time : N.A Think Time : N.A Minimum Instruction Time : 0

Correct Marks : 5 Wrong Marks : 1

Question Key Details :

Key	Value
Comprehension	MCQ

'मंडी नृत्य' हे हीणत्या राज्याचे लोकनृत्य आहे ?

- (1) पंजाब
- (2) उत्तर प्रदेश
- (3) गोवा
- (4) राजस्थान

Options :

- 212807119097 1
212807119098 2
212807119099 3
212807119100 4

Question Number : 290 Question Id : 21280719775 Question Type : MCQ Option Shuffling : No Is Question Mandatory : No Calculator : None
Response Time : N.A Think Time : N.A Minimum Instruction Time : 0

Correct Marks : 5 Wrong Marks : 1

Question Key Details :

Key	Value
Comprehension	MCQ

മണി ന്യൂനത ഏത് സംസ്ഥാനത്തെ നാടോടി നൃത്തമാണ് ?

- (1) പഞ്ചാബ്
- (2) ഉത്തർ പ്രദേശ്
- (3) തേറാപ്പ
- (4) രാജസ്ഥാൻ

Options :

212807119097 1

212807119098 2

212807119099 3

212807119100 4

Question Number : 290 Question Id : 21280719775 Question Type : MCQ Option Shuffling : No Is Question Mandatory : No Calculator : None
Response Time : N.A Think Time : N.A Minimum Instruction Time : 0

Correct Marks : 5 Wrong Marks : 1

Question Key Details :

Key	Value
Comprehension	MCQ

'ମାଣି ନୂଆ' କେଉଁ ରାജ്യର നാടോടി നൃത്തമാണ് ?

- (1) റാജസ്ഥാൻ
- (2) ഉത്തർ പ്രദേശ്
- (3) തേറാപ്പ
- (4) രാജസ്ഥാൻ

Options :

212807119097 1

212807119098 2

212807119099 3

212807119100 4

Question Number : 290 Question Id : 21280719775 Question Type : MCQ Option Shuffling : No Is Question Mandatory : No Calculator : None
Response Time : N.A Think Time : N.A Minimum Instruction Time : 0

Correct Marks : 5 Wrong Marks : 1

Question Key Details :

Key	Value
Comprehension	MCQ

'ਮੰਡੀ ਨਾਚ' ਕਿਹੜੇ ਰਾਜ ਦਾ ਲੋਕ ਨਾਚ ਹੈ ?

- (1) ਪੰਜਾਬ
- (2) ਉੱਤਰ ਪ੍ਰਦੇਸ਼
- (3) ਗോਆ
- (4) ਰാജസ്ഥਾൻ

Options :

212807119097 1

212807119098 2

212807119099 3
212807119100 4

Question Number : 290 Question Id : 21280719775 Question Type : MCQ Option Shuffling : No Is Question Mandatory : No Calculator : None
Response Time : N.A Think Time : N.A Minimum Instruction Time : 0

Correct Marks : 5 Wrong Marks : 1

Question Key Details :

Key	Value
Comprehension	MCQ

'మణిని నడనమ్' என்பது எந்த மாநிலத்தின் நாட்டுப்புற நడనమ్?

- (1) పంజాబ్
- (2) உத்தరప్ பிரதేశம்
- (3) கோவா
- (4) రాజస్థాన్

Options :

212807119097 1
212807119098 2
212807119099 3
212807119100 4

Question Number : 290 Question Id : 21280719775 Question Type : MCQ Option Shuffling : No Is Question Mandatory : No Calculator : None
Response Time : N.A Think Time : N.A Minimum Instruction Time : 0

Correct Marks : 5 Wrong Marks : 1

Question Key Details :

Key	Value
Comprehension	MCQ

"మండి నృత్యం" ఏ రాష్ట్ర జానపద నృత్యం ?

- (1) పంజాబ్
- (2) ఉత్తరప్రదేశ్
- (3) గోవా
- (4) రాజస్థాన్

Options :

212807119097 1
212807119098 2
212807119099 3
212807119100 4

Question Number : 290 Question Id : 21280719775 Question Type : MCQ Option Shuffling : No Is Question Mandatory : No Calculator : None
Response Time : N.A Think Time : N.A Minimum Instruction Time : 0

Correct Marks : 5 Wrong Marks : 1

Question Key Details :

Key	Value
Comprehension	MCQ

مندی نائی کس ریاست کا لوگ ڈالہا ہے ؟

(1) پنجاب

(2) اتر پردیش

(3) مگوا

(4) راجستھان

Options :

212807119097 1

212807119098 2

212807119099 3

212807119100 4

Question Number : 291 Question Id : 21280719776 Question Type : MCQ Option Shuffling : No Is Question Mandatory : No Calculator : None
Response Time : N.A Think Time : N.A Minimum Instruction Time : 0

Correct Marks : 5 Wrong Marks : 1

Question Key Details :

Key	Value
Comprehension	MCQ

Complete the series :

N3, P9, R27, T81, ?

(1) U81

(2) U243

(3) V162

(4) V243

Options :

212807119101 1

212807119102 2

212807119103 3

212807119104 4

Question Number : 291 Question Id : 21280719776 Question Type : MCQ Option Shuffling : No Is Question Mandatory : No Calculator : None
Response Time : N.A Think Time : N.A Minimum Instruction Time : 0

Correct Marks : 5 Wrong Marks : 1

Question Key Details :

Key	Value
Comprehension	MCQ

निम्नलिखित श्रंखला को पूरा कीजिए :

N3, P9, R27, T81, ?

(1) U81

(2) U243

(3) V162

(4) V243

Options :

212807119101 1

212807119102 2

212807119103 3

212807119104 4

Question Number : 291 Question Id : 21280719776 Question Type : MCQ Option Shuffling : No Is Question Mandatory : No Calculator : None
Response Time : N.A Think Time : N.A Minimum Instruction Time : 0

Correct Marks : 5 Wrong Marks : 1

Question Key Details :

Key	Value
Comprehension	MCQ

শুধুলাটো পূর্ণ কৰা :

N3, P9, R27, T81, ?

- (1) U81
- (2) U243
- (3) V162
- (4) V243

Options :

212807119101 1
212807119102 2
212807119103 3
212807119104 4

Question Number : 291 Question Id : 21280729776 Question Type : MCQ Option Shuffling : No Is Question Mandatory : No Calculator : None
Response Time : N.A Think Time : N.A Minimum Instruction Time : 0

Correct Marks : 5 Wrong Marks : 1

Question Key Details :

Key	Value
Comprehension	MCQ

শ্ৰেণীটো সম্পূৰ্ণ কৰো :

N3, P9, R27, T81, ?

- (1) U81
- (2) U243
- (3) V162
- (4) V243

Options :

212807119101 1
212807119102 2
212807119103 3
212807119104 4

Question Number : 291 Question Id : 21280729776 Question Type : MCQ Option Shuffling : No Is Question Mandatory : No Calculator : None
Response Time : N.A Think Time : N.A Minimum Instruction Time : 0

Correct Marks : 5 Wrong Marks : 1

Question Key Details :

Key	Value
Comprehension	MCQ

শ্ৰেণীটো পূৰ্ণ কৰা :

N3, P9, R27, T81, ?

- (1) U81
- (2) U243
- (3) V162
- (4) V243

Options :

212807119101 1
212807119102 2
212807119103 3
212807119104 4

Question Number : 291 Question Id : 212807119101 Question Type : MCQ Option Shuffling : No Is Question Mandatory : No Calculator : None
Response Time : N.A Think Time : N.A Minimum Instruction Time : 0

Correct Marks : 5 Wrong Marks : 1

Question Key Details :

Key	Value
Comprehension	MCQ

ಸರಣಿಯನ್ನು ಪೂರ್ಣಗೊಳಿಸಿ.

N3, P9, R27, T81, ___?

- (1) U81
- (2) U243
- (3) V162
- (4) V243

Options :

212807119101:1

212807119102:2

212807119103:3

212807119104:4

Question Number : 291 Question Id : 212807119102 Question Type : MCQ Option Shuffling : No Is Question Mandatory : No Calculator : None
Response Time : N.A Think Time : N.A Minimum Instruction Time : 0

Correct Marks : 5 Wrong Marks : 1

Question Key Details :

Key	Value
Comprehension	MCQ

साखळी पूर्ण करा :

N3, P9, R27, T81, ___?

- (1) U81
- (2) U243
- (3) V162
- (4) V243

Options :

212807119101:1

212807119102:2

212807119103:3

212807119104:4

Question Number : 291 Question Id : 212807119103 Question Type : MCQ Option Shuffling : No Is Question Mandatory : No Calculator : None
Response Time : N.A Think Time : N.A Minimum Instruction Time : 0

Correct Marks : 5 Wrong Marks : 1

Question Key Details :

Key	Value
Comprehension	MCQ

കന്നിമൂലം സീരിസ് പൂരിപ്പിക്കുക.

N3, P9, R27, T81, ___?

- (1) U81
- (2) U243
- (3) V162
- (4) V243

Options :

212807119101:1

212507119102 1
212507119103 3
212507119104 4

Question Number : 291 Question Id : 21250729776 Question Type : MCQ Option Shuffling : No Is Question Mandatory : No Calculator : None
Response Time : N.A Think Time : N.A Minimum Instruction Time : 0

Correct Marks : 5 Wrong Marks : 1

Question Key Details :

Key	Value
Comprehension	MCQ

ଉତ୍ତରକୁ ପୂରଣ କର :

N3, P9, R27, T81, ___ ?

- (1) U81
- (2) U243
- (3) V162
- (4) V243

Options :

212507119101 1
212507119102 2
212507119103 3
212507119104 4

Question Number : 291 Question Id : 21250729776 Question Type : MCQ Option Shuffling : No Is Question Mandatory : No Calculator : None
Response Time : N.A Think Time : N.A Minimum Instruction Time : 0

Correct Marks : 5 Wrong Marks : 1

Question Key Details :

Key	Value
Comprehension	MCQ

ଫିଲ ବ୍ଲକ ଠିକ୍ ପୂରା କର -

N3, P9, R27, T81, ___ ?

- (1) U81
- (2) U243
- (3) V162
- (4) V243

Options :

212507119101 1
212507119102 2
212507119103 3
212507119104 4

Question Number : 291 Question Id : 21250729776 Question Type : MCQ Option Shuffling : No Is Question Mandatory : No Calculator : None
Response Time : N.A Think Time : N.A Minimum Instruction Time : 0

Correct Marks : 5 Wrong Marks : 1

Question Key Details :

Key	Value
Comprehension	MCQ

தொடரை நிறைவு செய்யுங்கள் :

N3, P9, R27, T81, _____ ?

(1) U81

(2) U243

(3) V162

(4) V243

Options :

212807119101:1

212807119102:2

212807119103:3

212807119104:4

Question Number : 291 Question Id : 21280719776 Question Type : MCQ Option Shuffling : No Is Question Mandatory : No Calculator : None
Response Time : N.A Think Time : N.A Minimum Instruction Time : 0

Correct Marks : 5 Wrong Marks : 1

Question Key Details :

Key	Value
Comprehension	MCQ

தேர்ச்சி முடிந்தது :

N3, P9, R27, T81, _____ ?

(1) U81

(2) U243

(3) V162

(4) V243

Options :

212807119101:1

212807119102:2

212807119103:3

212807119104:4

Question Number : 291 Question Id : 21280719776 Question Type : MCQ Option Shuffling : No Is Question Mandatory : No Calculator : None
Response Time : N.A Think Time : N.A Minimum Instruction Time : 0

Correct Marks : 5 Wrong Marks : 1

Question Key Details :

Key	Value
Comprehension	MCQ

سیریز کو مکمل کریں :

N3, P9, R27, T81, _____ ?

U81 (1)

U243 (2)

V162 (3)

V243 (4)

Options :

212807119101:1

212807119102 1
212807119103 3
212807119104 4

Question Number : 293 Question Id : 21280729777 Question Type : MCQ Option Shuffling : No Is Question Mandatory : No Calculator : None
Response Time : N.A Think Time : N.A Minimum Instruction Time : 0

Correct Marks : 5 Wrong Marks : 1

Question Key Details :

Key	Value
Comprehension	MCQ

In given question, there is a relation between two given words on one side of :: and one is given on another side of :: Find the missing word having the same relation.

Menu : Food :: Catalogue : ?

- (1) Rack
- (2) Newspaper
- (3) Library
- (4) Book

Options :

212807119105 1
212807119106 3
212807119107 1
212807119108 4

Question Number : 292 Question Id : 21280729777 Question Type : MCQ Option Shuffling : No Is Question Mandatory : No Calculator : None
Response Time : N.A Think Time : N.A Minimum Instruction Time : 0

Correct Marks : 5 Wrong Marks : 1

Question Key Details :

Key	Value
Comprehension	MCQ

नीचे दिए गए प्रश्न में एक ओर :: दिए गए दो शब्दों के बीच संबंध है और दूसरी ओर :: एक अन्य दिया गया है। तो इसी संबंध वाला अविद्यमान शब्द ज्ञात कीजिए।

मेनु : खाद्य पदार्थ :: कैटेलाग : ?

- (1) रैक
- (2) समाचार-पत्र
- (3) पुस्तकालय
- (4) पुस्तक

Options :

212807119105 1
212807119106 3
212807119107 1
212807119108 4

Question Number : 292 Question Id : 21280729777 Question Type : MCQ Option Shuffling : No Is Question Mandatory : No Calculator : None
Response Time : N.A Think Time : N.A Minimum Instruction Time : 0

Correct Marks : 5 Wrong Marks : 1

Question Key Details :

Key	Value
Comprehension	MCQ

উক্ত প্রশ্নটোয়, এইটো ফালল শব্দৰ লগত আনটো ফালল শব্দটোৰ এটা সম্পৰ্ক আছে। একেই সম্পৰ্ক বহন কৰা হেৰুৱা শব্দটো কি হ'ব?

মেনু : খাদ্য :: পুথিৰ তালিকা : _____?

- (1) বেক
- (2) বাতৰি কাকত
- (3) পুথিভঁৰাল
- (4) কিতাপ

Options :

212807119103 1

212807119104 2

212807119107 3

212807119108 4

Question Number : 292 Question Id : 21280729777 Question Type : MCQ Option Shuffling : No Is Question Mandatory : No Calculator : None
Response Time : N.A Think Time : N.A Minimum Instruction Time : 0

Correct Marks : 5 Wrong Marks : 1

Question Key Details :

Key	Value
Comprehension	MCQ

প্রদত্ত প্রশ্নে দুটি শব্দৰ মध्ये ::-এৰ এক দিকের শব্দ এবং ::-এৰ অপর দিকের শব্দেৰ মধ্যে একটি সম্পৰ্ক আছে। একইভাবে সম্পৰ্কিত অনুপস্থিত শব্দটি খুঁজে বান কৰো।

খাদ্য তালিকা : খাদ্য :: সূচি : _____?

- (1) তাক
- (2) খবৰেৰ কাগজ
- (3) গ্ৰন্থাগাৰ
- (4) পুস্তক

Options :

212807119103 1

212807119104 2

212807119107 3

212807119108 4

Question Number : 292 Question Id : 21280729777 Question Type : MCQ Option Shuffling : No Is Question Mandatory : No Calculator : None
Response Time : N.A Think Time : N.A Minimum Instruction Time : 0

Correct Marks : 5 Wrong Marks : 1

Question Key Details :

Key	Value
Comprehension	MCQ

આપેલ પ્રશ્નમાં, આપેલા બે શબ્દોની એક બાહ્ય વચ્ચે સંબંધ છે :: અને એક બીજી બાહ્યએ આપેલ છે :: અને એક બીજી બાહ્યએ આપેલ છે :: સમાન સંબંધ ધરાવતો ખૂટલો (ગૂમ) ધરાવેલ શબ્દ શોધો.

Menu (મેનુ) : Food (ખોરાક) :: Catalogue (સૂચિ) : ?

- (1) રેક (Rack)
- (2) અખબાર (Newspaper)
- (3) પુસ્તકાલય (Library)
- (4) પુસ્તક (Book)

Options :

212807119105 1
212807119106 2
212807119107 3
212807119108 4

Question Number : 292 Question Id : 21280729777 Question Type : MCQ Option Shuffling : No Is Question Mandatory : No Calculator : None
Response Time : N.A Think Time : N.A Minimum Instruction Time : 0

Correct Marks : 5 Wrong Marks : 1

Question Key Details :

Key	Value
Comprehension	MCQ

એકબીજા સંબંધમાં કોઈક વસ્તુની એક બાજુ પરથી સંબંધિત છે, an one side of :: and one is given on another side of :: આદે ઉપર સંબંધિત વસ્તુની એક બાજુ પરથી સંબંધિત છે.

Menu : Food :: Catalogue : ?

- (1) Rack
- (2) Newspaper
- (3) Library
- (4) Book

Options :

212807119105 1
212807119106 2
212807119107 3
212807119108 4

Question Number : 292 Question Id : 21280729777 Question Type : MCQ Option Shuffling : No Is Question Mandatory : No Calculator : None
Response Time : N.A Think Time : N.A Minimum Instruction Time : 0

Correct Marks : 5 Wrong Marks : 1

Question Key Details :

Key	Value
Comprehension	MCQ

સહસંબંધ ઓછામાં ઓછા પ્રશ્નચિન્હાવ્યા જાગી કોણતા પર્યાય ચેરેલ તે શોધા.

મેન્યુ : ખાદ્ય :: કેટલોગ : ?

- (1) રેક
- (2) વૃત્તપત્ર
- (3) ગ્રંથાલય
- (4) પુસ્તક

Options :

212807119105 1
212807119106 2

212807119107 3
212807119108 4

Question Number : 292 Question Id : 21280719777 Question Type : MCQ Option Shuffling : No Is Question Mandatory : No Calculator : None
Response Time : N.A Think Time : N.A Minimum Instruction Time : 0
Correct Marks : 5 Wrong Marks : 1

Question Key Details :

Key	Value
Comprehension	MCQ

വിദ്യാലയം പുസ്തകശാଳ.

Menu : Food : : Catalogue : ?

- (1) Rack
- (2) Newspaper
- (3) Library
- (4) Book

Options :

212807119105 1
212807119106 2
212807119107 3
212807119108 4

Question Number : 293 Question Id : 21280719777 Question Type : MCQ Option Shuffling : No Is Question Mandatory : No Calculator : None
Response Time : N.A Think Time : N.A Minimum Instruction Time : 0
Correct Marks : 5 Wrong Marks : 1

Question Key Details :

Key	Value
Comprehension	MCQ

ପ୍ରକଳ ସମାଜରଣାରେ, ଏଠାରେ ଗୋଟିଏ ପାଣ୍ଡିରେ ଦୁଇ ଶବ୍ଦ ମଧ୍ୟରେ ସମ୍ପର୍କ :: ଅନ୍ୟ ପାଣ୍ଡିରେ ଗୋଟିଏ ବିଆଯାଉଛି :: ଉଦ୍ଦିଷ୍ଟାଂଶୁକ
ଶବ୍ଦଟି ବାଲ ଯିଏକି ସମାନ ସମ୍ପର୍କ ପାଳନ କରୁଥିବ ।

ସୂଚୀ : ଶାବ୍ୟ :: କ୍ୟାବେଲ୍ : ?

- (1) ଶାଳ
- (2) ଉଦରକାଗଜ (ସମ୍ବାଦପତ୍ର)
- (3) ଲାଲଗୁରୁଜୀ
- (4) ପୁସ୍ତକ (କବି)

Options :

212807119105 1
212807119106 2
212807119107 3
212807119108 4

Question Number : 292 Question Id : 21280719777 Question Type : MCQ Option Shuffling : No Is Question Mandatory : No Calculator : None
Response Time : N.A Think Time : N.A Minimum Instruction Time : 0
Correct Marks : 5 Wrong Marks : 1

Question Key Details :

Key	Value
Comprehension	MCQ

ਹੇਠਾਂ ਦਿੱਤੇ ਗਏ ਪ੍ਰਸ਼ਨ ਵਿਚ ਦਿੱਤੇ ਗਏ ਦੋ ਸ਼ਬਦਾਂ ਦਾ ਇਕ ਪਾਸੇ : ਇਕ ਦਾ ਦੂਜੇ ਪਾਸੇ :: ਦਾ ਸਬੰਧ ਹੈ । ਸਮਾਨ ਸਬੰਧ ਵਾਲੇ ਗੁੰਮ ਹੋਏ ਸ਼ਬਦ ਨੂੰ ਲੱਭੋ ।

ਮੀਨੂ : ਭੋਜਨ :: ਸੂਚੀ ਪੱਤਰ : ?

- (1) ਰੈਕ
- (2) ਅਖਬਾਰ
- (3) ਲਾਇਬ੍ਰੇਰੀ
- (4) ਕਿਤਾਬ

Options :

212807119103_1

212807119106_2

212807119107_3

212807119108_4

Question Number : 292 Question Id : 21280719777 Question Type : MCQ Option Shuffling : No Is Question Mandatory : No Calculator : None Response Time : N.A Think Time : N.A Minimum Instruction Time : 0

Correct Marks : 5 Wrong Marks : 1

Question Key Details :

Key	Value
Comprehension	MCQ

ਕੋਮਾਨੁਕਕਪਪੱਟ ਕੇਲਵਿਯਿਲ, ਕੋਮਾਨੁਕਕਪਪੱਟ ਊਰਨੋਨੁ ਸੋਮਾਨੁਕਨੁਕਕੁ ਊਨਾਏਏ ਓਨੁ ਕੋਮਾਨੁਰਪੁ ਊਲੁਗੁਤੁ :: ਮਨੁਰੋਮਾਨੁ ਪਕਕਕੁਕੁਕੁ ਓਨੁਨੁ ਕੋਮਾਨੁਕਕਪਪੱਟੁਨੁਲੁਗੁਤੁ :: ਓਰੇ ਊਠਵੇਕੁ ਕੋਮਾਨੁਨੁ ਵੀਨੁਪੱਟੁ ਸੋਮਾਲੁਲੇਕੁ ਕਨੁਨੁਪੀਧਿਧੁਨੁਕੁਲੁ.

ਮੋਮਨੁ : ਊਨੋਨੁ :: ਪੱਧਿਧਲੁ : ?

- (1) ਅਧਿਵੁ ਪਾਠਾਠਲੁ
- (2) ਸੋਧੁਕੁਕੁਠਾਨੁ
- (3) ਨੁਲੁ ਨੀਲੇਧਮੁ
- (4) ਪੁਕੁਠਕਮੁ

Options :

212807119103_1

212807119106_2

212807119107_3

212807119108_4

Question Number : 292 Question Id : 21280719777 Question Type : MCQ Option Shuffling : No Is Question Mandatory : No Calculator : None Response Time : N.A Think Time : N.A Minimum Instruction Time : 0

Correct Marks : 5 Wrong Marks : 1

Question Key Details :

Key	Value
Comprehension	MCQ

దక్ష ప్రశ్నలో : కి ఒక వైపు రెండు పదాల మధ్య ఒక సంబంధం ఉంది మరియు :: మరొక వైపు ఒక పదాన్ని ఇచ్చారు. సమాన సంబంధాన్ని ఏర్పరిచే తప్పిన పదాన్ని కనుక్కోండి ?

Menu : Food :: Catalogue : ___?

- (1) Rack
- (2) Newspaper
- (3) Library
- (4) Book

Options :

- 212807119105 1
212807119106 2
212807119107 3
212807119108 4

Question Number : 292 Question Id : 21280729777 Question Type : MCQ Option Shuffling : No Is Question Mandatory : No Calculator : None
Response Time : N.A Think Time : N.A Minimum Instruction Time : 0

Correct Marks : 5 Wrong Marks : 1

Question Key Details :

Key	Value
Comprehension	MCQ

دئے گئے سوالات میں نشان میں : : کے ایک سائنڈ میں اور نشان : : کے دوسرے کے سائنڈ میں دو لفظوں کے درمیان ایک تعلق ہے ایک ہی طرح کے تعلق رکھنے والے کلمہ دو لفظ کو دریافت کریں۔

میںو : کھانا :: کیتاگ : _____ ?

- (1) ریک
- (2) اخبار
- (3) انجیری
- (4) کتاب

Options :

- 212807119105 1
212807119106 2
212807119107 3
212807119108 4

Question Number : 293 Question Id : 21280729778 Question Type : MCQ Option Shuffling : No Is Question Mandatory : No Calculator : None
Response Time : N.A Think Time : N.A Minimum Instruction Time : 0

Correct Marks : 5 Wrong Marks : 1

Question Key Details :

Key	Value
Comprehension	MCQ

Here are some words translated from artificial language:

'sin co bye' means 'He is good'

'co mot det' means 'They are good'

Which code word stands for 'good' in the same artificial language ?

- (1) sin
- (2) bye
- (3) co
- (4) mot

Options :

212807119109-1

212807119110-2

212807119111-3

212807119112-4

Question Number : 293 Question Id : 21280729778 Question Type : MCQ Option Shuffling : No Is Question Mandatory : No Calculator : None
Response Time : N.A Think Time : N.A Minimum Instruction Time : 0

Correct Marks : 5 Wrong Marks : 1

Question Key Details :

Key	Value
Comprehension	MCQ

नीचे कृत्रिम भाषा से अनुवादित कुछ शब्द हैं :

'sin co bye' का अर्थ है 'He is good'

'co mot det' का अर्थ है 'They are good'

इसी कृत्रिम भाषा में 'good' का सूचक कौन-सा कूट है ?

- (1) sin
- (2) bye
- (3) co
- (4) mot

Options :

212807119109-1

212807119110-2

212807119111-3

212807119112-4

Question Number : 293 Question Id : 21280729778 Question Type : MCQ Option Shuffling : No Is Question Mandatory : No Calculator : None
Response Time : N.A Think Time : N.A Minimum Instruction Time : 0

Correct Marks : 5 Wrong Marks : 1

Question Key Details :

Key	Value
Comprehension	MCQ

কৃত্রিম ভাষায় পত্রা কিছুমান শব্দ অনুবাদ করা হৈছে।

'sin co bye' মানে 'সি ভাল'

'co mot det' মানে 'সিহঁত ভাল'

একেই কৃত্রিম ভাষাত কোনটো গোপনীয় শব্দ মানে 'ভাল' বুজাইছে ?

- (1) sin
- (2) bye
- (3) co
- (4) mot

Options :

212807119109-1

212807119110-2

212807119111-3

212807119112-4

Question Number : 293 Question Id : 21280719775 Question Type : MCQ Option Shuffling : No Is Question Mandatory : No Calculator : None
Response Time : N.A Think Time : N.A Minimum Instruction Time : 0

Correct Marks : 5 Wrong Marks : 1

Question Key Details :

Key	Value
Comprehension	MCQ

এখানে কিছু শব্দ কৃত্রিম বুদ্ধিমত্তা থেকে অনুবাদ করা হরোছে।

'sin co bye' মানে 'He is good'

'co mot-det' মানে 'They are good'

কৃত্রিম বুদ্ধিমত্তার ভাষায় কোন শব্দের মানে 'good' ?

- (1) sin
- (2) bye
- (3) co
- (4) mot

Options :

212807119109-1

212807119110-2

212807119111-3

212807119112-4

Question Number : 293 Question Id : 21280719775 Question Type : MCQ Option Shuffling : No Is Question Mandatory : No Calculator : None
Response Time : N.A Think Time : N.A Minimum Instruction Time : 0

Correct Marks : 5 Wrong Marks : 1

Question Key Details :

Key	Value
Comprehension	MCQ

અહીંયા કૃત્રિમ ભાષા માંથી ભાષાંતર કરેલા કેટલાક શબ્દો છે.

'sin co bye' means 'He is good'

'co mot det' means 'They are good'

કૃત્રિમ ભાષામાં કયો સમાન શબ્દ 'good' માટે વપરાય છે?

- (1) sin
- (2) bye
- (3) co
- (4) mot

Options :

212807119109 1

212807119110 2

212807119111 3

212807119112 4

Question Number : 293 Question Id : 21280729778 Question Type : MCQ Option Shuffling : No Is Question Mandatory : No Calculator : None
Response Time : N.A Think Time : N.A Minimum Instruction Time : 0

Correct Marks : 5 Wrong Marks : 1

Question Key Details :

Key	Value
Comprehension	MCQ

અહીં કેલવુ શબ્દોનું કૃત્રિમ ભાષાંતર કરેલા કેટલાક શબ્દો છે.

'sin co bye' means 'He is good'

'co mot det' means 'They are good'

આમાં સંકેત શબ્દ 'good' નું કયું કૃત્રિમ ભાષાંતર શબ્દ છે ?

- (1) sin
- (2) bye
- (3) co
- (4) mot

Options :

212807119109 1

212807119110 2

212807119111 3

212807119112 4

Question Number : 293 Question Id : 21280729778 Question Type : MCQ Option Shuffling : No Is Question Mandatory : No Calculator : None
Response Time : N.A Think Time : N.A Minimum Instruction Time : 0

Correct Marks : 5 Wrong Marks : 1

Question Key Details :

Key	Value
Comprehension	MCQ

പുറീൽ കതീ ശബ്ദ റെ ഏക കൃത്രിമ ഭാഷേതൂത ഭാഷേതരിത കരണ്യേത അലേ അരേത.

'sin co bye' മ്ഹണ്ജേ 'He is good'

'co mot det' മ്ഹണ്ജേ 'They are good'

യേച കൃത്രിമ ഭാഷേത 'good' സാദീ കോണ്യത ശബ്ദ വേപരലേ ജാതീ?

- (1) sin
- (2) bye
- (3) co
- (4) mot

Options :

212807119109 1

212807119110 2

212807119111 3

212807119112 4

Question Number : 293 Question Id : 21280719775 Question Type : MCQ Option Shuffling : No Is Question Mandatory : No Calculator : None
Response Time : N.A Think Time : N.A Minimum Instruction Time : 0

Correct Marks : 5 Wrong Marks : 1

Question Key Details :

Key	Value
Comprehension	MCQ

കൃത്യതീമ ഭാഷേയിരേ നീന്നൂത പരിഭാഷേപ്പെടുത്തീയ ചീല വാക്കുക്കൾ താഴെ കെറടുക്കുണ്യ.

'sin co bye' എണ്ണാതേ 'He is good'

'co mot det' എണ്ണാതേ 'They are good'

ഈ ഭാഷേയിരേ 'good' എണ്ണ വരക്കിന് പകരം ഉപയോഗീക്കുണ്ണ കേറഡ് എത്തീ?

- (1) sin
- (2) bye
- (3) co
- (4) mot

Options :

212807119109 1

212807119110 2

212807119111 3

212807119112 4

Question Number : 293 Question Id : 21280719775 Question Type : MCQ Option Shuffling : No Is Question Mandatory : No Calculator : None
Response Time : N.A Think Time : N.A Minimum Instruction Time : 0

Correct Marks : 5 Wrong Marks : 1

Question Key Details :

Key	Value
Comprehension	MCQ

ਕੁਰ੍ਹਿਮ ਆਖਾਰੋਂ ਬਸਾਨ ਕਰਕੇ ਅਨੁਭਵ ਕਰਾਇਆ।

‘ਬਿਨ ਯੋਗੇ ਜਾਇ’ ਤੇ ‘ਯੇ ਵਰ੍ਹੇ ਭਲ’

‘ਯੋਗੇ ਜਾਇ’ ਤੇ ‘ਬਿਨ ਯੋਗੇ ਵਰ੍ਹੇ ਭਲ’

‘ਯੋਗੇ ਜਾਇ’ ਤੇ ‘ਬਿਨ ਯੋਗੇ ਵਰ੍ਹੇ ਭਲ’

ਕੋਈ ਸ਼ਬਦ ਕਿਹੜਾ ਹੈ ਜਿਸ ਦਾ ਮਤਲਬ ਨਹੀਂ ਹੈ ?

- (1) ਬਿਨ (sin)
- (2) ਜਾਇ (bye)
- (3) ਯੋਗੇ (co)
- (4) ਜਾਇ (mot)

Options :

212807119109 : 1

212807119110 : 2

212807119111 : 3

212807119112 : 4

Question Number : 293 Question Id : 21280719778 Question Type : MCQ Option Shuffling : No Is Question Mandatory : No Calculator : None

Response Time : N.A Think Time : N.A Minimum Instruction Time : 0

Correct Marks : 5 Wrong Marks : 1

Question Key Details :

Key	Value
Comprehension	MCQ

ਇਹੋ ਕੁਝ ਸ਼ਬਦਾਂ ਦਾ ਨਕਲੀ ਭਾਸ਼ਾ ਵਿਚ ਅਨੁਵਾਦ ਕੀਤਾ ਹੈ।

‘ਸਿਨ ਕੋ ਬਾਇ’ ਮਤਲਬ ‘ਹੀ ਇਜ ਗੁੱਡ’

‘ਕੋ ਮੋਟ ਡੇਟ’ ਮਤਲਬ ‘ਦੇ ਆਰ ਗੁੱਡ’

ਇਹੋ ਜਿਹੀ ਨਕਲੀ ਭਾਸ਼ਾ ਵਿਚ ‘ਗੁੱਡ’ ਸ਼ਬਦ ਲਈ ਕਿਹੜਾ ਕੋਡ ਸ਼ਬਦ ਖੜਾ ਹੈ ?

- (1) ਸਿਨ
- (2) ਬਾਇ
- (3) ਕੋ
- (4) ਮੋਟ

Options :

212807119109 : 1

212807119110 : 2

212807119111 : 3

212807119112 : 4

Question Number : 293 Question Id : 21280719778 Question Type : MCQ Option Shuffling : No Is Question Mandatory : No Calculator : None

Response Time : N.A Think Time : N.A Minimum Instruction Time : 0

Correct Marks : 5 Wrong Marks : 1

Question Key Details :

Key	Value
Comprehension	MCQ

செயற்கை மொழியில் இருந்து மொழிபெயர்க்கப்பட்ட சில சொற்கள் இங்கே.

'பாவம் கோ பை' என்றால் 'அவர் நல்லவர்' என்று பொருள்.

'கோ மோட் டெட்' என்றால் 'அவர்கள் நல்லவர்கள்' என்று பொருள்.

அதே செயற்கை மொழியில் 'நல்லது' என்பதைக் குறிக்கும் குறியீட்டுச் சொல் எது?

- (1) இல்லாமல்
- (2) பை
- (3) co
- (4) எதிராக

Options :

112807119109 1

212807119110 2

312807119111 3

412807119112 4

Question Number : 293 Question Id : 21280729778 Question Type : MCQ Option Shuffling : No Is Question Mandatory : No Calculator : None
Response Time : N.A Think Time : N.A Minimum Instruction Time : 0

Correct Marks : 5 Wrong Marks : 1

Question Key Details :

Key	Value
Comprehension	MCQ

కృత్రిమ భాష నుండి కొన్ని పదాలు అనువదించారు.

'sin co bye' అనగా 'He is good'

'co mot det' అనగా 'They are good'

ఆ కృత్రిమ భాషలో 'good' కి సమాన కోడ్ పదం ఏది ?

- (1) sin
- (2) bye
- (3) co
- (4) mot

Options :

112807119109 1

212807119110 2

312807119111 3

412807119112 4

Question Number : 293 Question Id : 21280729778 Question Type : MCQ Option Shuffling : No Is Question Mandatory : No Calculator : None
Response Time : N.A Think Time : N.A Minimum Instruction Time : 0

Correct Marks : 5 Wrong Marks : 1

Question Key Details :

Key	Value
Comprehension	MCQ

یہاں کچھ لفظوں کا ترجمہ مصنوعی زبان سے کیا گیا ہے

'He is good' کا مطلب 'sin co bye'

'They are good' کا مطلب 'co mot det'

اس مصنوعی زبان میں کون سا کوڈ "Good" کے لئے استعمال کیا گیا ہے ؟

sin (1)

bye (2)

co (3)

mot (4)

Options :

112807119109 1

212507119110 2

212807119111 3

212807119112 4

Question Number : 294 Question Id : 21280729779 Question Type : MCQ Option Skuffling : No Is Question Mandatory : No Calculator : None

Response Time : N.A Think Time : N.A Minimum Instruction Time : 0

Correct Marks : 5 Wrong Marks : 1

Question Key Details :

Key	Value
Comprehension	MCQ

Introducing a man, a woman said, 'His wife is the only daughter of my father.' How is that man related to the woman ?

- (1) Brother
- (2) Husband
- (3) Father-in-law
- (4) Maternal uncle

Options :

212807119113 1

212507119114 2

212807119115 3

212807119116 4

Question Number : 294 Question Id : 21280729779 Question Type : MCQ Option Skuffling : No Is Question Mandatory : No Calculator : None

Response Time : N.A Think Time : N.A Minimum Instruction Time : 0

Correct Marks : 5 Wrong Marks : 1

Question Key Details :

Key	Value
Comprehension	MCQ

एक महिला ने एक पुरुष का परिचय देते हुए कहा : " इनकी पत्नी मेरे पिता की एकमात्र पुत्री है। " वह पुरुष उस महिला से कैसे संबंधित है ?

- (1) भाई
- (2) पति
- (3) ससुर
- (4) नाना

Options :

- 212807119113-1
212807119114-2
212807119115-3
212807119116-4

Question Number : 294 Question Id : 21280729779 Question Type : MCQ Option Shuffling : No Is Question Mandatory : No Calculator : None
Response Time : N.A Think Time : N.A Minimum Instruction Time : 0

Correct Marks : 5 Wrong Marks : 1

Question Key Details :

Key	Value
Comprehension	MCQ

এজন পুৰুষক পৰিচয় কৰাই মহিলা এজনীয়ে ক'লে, তেওঁৰ মৈথীয়েক মোৰ দেউতাৰ একমাত্ৰ জীয়াৰী। সেই পুৰুষজনৰ মহিলাগৰাকীৰ লগত কি সম্পৰ্কৰে জড়িত ?

- (1) ভায়েক
(2) গিৰিয়েক
(3) শ্বশুৰ
(4) মামা

Options :

- 212807119113-1
212807119114-2
212807119115-3
212807119116-4

Question Number : 294 Question Id : 21280729779 Question Type : MCQ Option Shuffling : No Is Question Mandatory : No Calculator : None
Response Time : N.A Think Time : N.A Minimum Instruction Time : 0

Correct Marks : 5 Wrong Marks : 1

Question Key Details :

Key	Value
Comprehension	MCQ

একজন পুৰুষকে পৰিচয় কৰাতে, এক মহিলা বলিলে, 'তাৰ স্ত্ৰী হল আমাৰ পিতাৰ একমাত্ৰ বন্যা'। পুৰুষটি কীভাবে মহিলাৰ সান্ধে সম্পৰ্কিত ?

- (1) ভাই
(2) দামী
(3) শ্বশুৰমশাই
(4) মামা

Options :

- 212807119113-1
212807119114-2
212807119115-3
212807119116-4

Question Number : 294 Question Id : 21280729779 Question Type : MCQ Option Shuffling : No Is Question Mandatory : No Calculator : None
Response Time : N.A Think Time : N.A Minimum Instruction Time : 0

Correct Marks : 5 Wrong Marks : 1

Question Key Details :

Key	Value
Comprehension	MCQ

એક પુરુષનો પરિચય આપતા એક સ્ત્રીએ કહ્યું -

'તેની પત્ની મારા પિતાની એકમાત્ર પુત્રી છે' તે પુરુષ ને સ્ત્રી સાથે કેવી રીતે સંબંધ છે?

- (1) ભાઈ
- (2) પતિ
- (3) સસરા
- (4) મામા

Options :

112807119113 1

112807119114 2

112807119115 3

112807119116 4

Question Number : 294 Question Id : 21280729779 Question Type : MCQ Option Shuffling : No Is Question Mandatory : No Calculator : None
Response Time : N.A Think Time : N.A Minimum Instruction Time : 0

Correct Marks : 5 Wrong Marks : 1

Question Key Details :

Key	Value
Comprehension	MCQ

'અવન હેનકતિયુ નસ્ય તન્દેયુ હ્યુકે મગલુ' એમું હ્યુ મહિલે હ્યુ વ્યક્તિયનુ પરિચયસુચ્યગ
ખેલિદયુ. અ વ્યક્તિયુ મહિલેગે ખેગે સંબંધિકસગિદ્યુતે ?

- (1) સહેલદર
- (2) પતિ
- (3) મામા
- (4) માતૃક હેલુવ

Options :

112807119113 1

112807119114 2

112807119115 3

112807119116 4

Question Number : 294 Question Id : 21280729779 Question Type : MCQ Option Shuffling : No Is Question Mandatory : No Calculator : None
Response Time : N.A Think Time : N.A Minimum Instruction Time : 0

Correct Marks : 5 Wrong Marks : 1

Question Key Details :

Key	Value
Comprehension	MCQ

एका पुरुषाची ओळखा करून देताना एक महिला म्हणाली, "याची बायको ही माझ्या वडिलांची एकुलती एक मुलगी आहे" त्या
पुरुषाचे त्या महिलेशी असणारे नले काय ?

- (1) भाऊ
- (2) पती
- (3) सासरा
- (4) काका

Options :

112807119113 1

112807119114 2

112807119115 3

112807119116 4

Question Number : 294 Question Id : 21280719779 Question Type : MCQ Option Shuffling : No Is Question Mandatory : No Calculator : None
Response Time : N.A Think Time : N.A Minimum Instruction Time : 0

Correct Marks : 5 Wrong Marks : 1

Question Key Details :

Key	Value
Comprehension	MCQ

ഒരു പുരുഷനെ പരിചയപ്പെടുത്തിക്കൊണ്ട് ഒരു സ്ത്രീ പറഞ്ഞു, “അയാളുടെ ഭാര്യ എന്റെ അച്ഛന്റെ ഒരു മകളാണ്.” ആ പുരുഷൻ ഈ സ്ത്രീയുമായുള്ള ബന്ധം എന്ത് ?

- (1) സഹോദരൻ
- (2) ഭർത്താവ്
- (3) അമ്മായിയച്ഛൻ
- (4) മാതൃ സഹോദരൻ

Options :

21280719113 1

21280719114 2

21280719115 3

21280719116 4

Question Number : 294 Question Id : 21280719779 Question Type : MCQ Option Shuffling : No Is Question Mandatory : No Calculator : None
Response Time : N.A Think Time : N.A Minimum Instruction Time : 0

Correct Marks : 5 Wrong Marks : 1

Question Key Details :

Key	Value
Comprehension	MCQ

ശ്രീകൃഷ്ണൻ പൂജിക്കാൻ തീർത്ഥം പോകാൻ പോകുന്നതിന് മുമ്പ്, “ഓം നമഃ ശിവായ” എന്ന് പ്രാർത്ഥിക്കാൻ കഴിയാതെ പോകാൻ കഴിഞ്ഞു. കാര്യം എന്തായിരുന്നു ?

- (1) വെളിച്ചം
- (2) ദർശനം
- (3) ശബ്ദം
- (4) സ്പർശം

Options :

21280719113 1

21280719114 2

21280719115 3

21280719116 4

Question Number : 294 Question Id : 21280719779 Question Type : MCQ Option Shuffling : No Is Question Mandatory : No Calculator : None
Response Time : N.A Think Time : N.A Minimum Instruction Time : 0

Correct Marks : 5 Wrong Marks : 1

Question Key Details :

Key	Value
Comprehension	MCQ

ਇਕ ਆਦਮੀ ਨਾਲ ਜਾਣ ਪਛਾਣ ਕਰਾਉਂਦੇ ਹੋਏ ਇਕ ਔਰਤ ਨੇ ਕਿਹਾ ਕਿ ਉਸਦੀ ਪਤਨੀ ਮੇਰੇ ਪਿਤਾ ਦੀ ਇਕਲੌਤੀ ਧੀ ਹੈ । ਉਸ ਆਦਮੀ ਦਾ ਔਰਤ ਨਾਲ ਕੀ ਸੰਬੰਧ ਹੈ ।

- (1) ਭਰਾ
- (2) ਪਤੀ
- (3) ਸਹੁਰਾ
- (4) ਮਾਮਾਜੀ

Options :

- 212807119113 : 1
 212807119114 : 2
 212807119115 : 3
 212807119116 : 4

Question Number : 294 Question Id : 21280729779 Question Type : MCQ Option Shuffling : No Is Question Mandatory : No Calculator : None
 Response Time : N.A Think Time : N.A Minimum Instruction Time : 0

Correct Marks : 5 Wrong Marks : 1

Question Key Details :

Key	Value
Comprehension	MCQ

ਓਹ ਆਦਮੀ ਨਾਲ ਜਾਣ ਪਛਾਣ ਕਰਾਉਂਦੇ ਹੋਏ ਇਕ ਔਰਤ ਨੇ ਕਿਹਾ ਕਿ ਉਸਦੀ ਪਤਨੀ ਮੇਰੇ ਪਿਤਾ ਦੀ ਇਕਲੌਤੀ ਧੀ ਹੈ । ਉਸ ਆਦਮੀ ਦਾ ਔਰਤ ਨਾਲ ਕੀ ਸੰਬੰਧ ਹੈ ।

- (1) ਖੜਕ
- (2) ਖੜਕ
- (3) ਖੜਕ
- (4) ਖੜਕ

Options :

- 212807119113 : 1
 212807119114 : 2
 212807119115 : 3
 212807119116 : 4

Question Number : 294 Question Id : 21280729779 Question Type : MCQ Option Shuffling : No Is Question Mandatory : No Calculator : None
 Response Time : N.A Think Time : N.A Minimum Instruction Time : 0

Correct Marks : 5 Wrong Marks : 1

Question Key Details :

Key	Value
Comprehension	MCQ

ਇਕ ਪੁਰੁਸ਼ ਦੀ ਪਤਨੀ ਨੇ ਕਿਹਾ ਕਿ ਉਸਦੀ ਪਤਨੀ ਮੇਰੇ ਪਿਤਾ ਦੀ ਇਕਲੌਤੀ ਧੀ ਹੈ । ਉਸ ਪੁਰੁਸ਼ ਦਾ ਔਰਤ ਨਾਲ ਕੀ ਸੰਬੰਧ ਹੈ ?

- (1) ਖੜਕ
- (2) ਖੜਕ
- (3) ਖੜਕ
- (4) ਖੜਕ

Options :

212507119113:1
212507119114:2
212507119115:3
212507119116:4

Question Number : 294 Question Id : 21250719779 Question Type : MCQ Option Shuffling : No Is Question Mandatory : No Calculator : None
Response Time : N.A Think Time : N.A Minimum Instruction Time : 0

Correct Marks : 5 Wrong Marks : 1

Question Key Details :

Key	Value
Comprehension	MCQ

ایک مرد کا تعارف کراتے ہوئے ایک عورت نے کہا "اس کی بیوی میرے والد کی اکلوتی بیٹی ہے" مرد کا اس عورت کے ساتھ کس طرح کا رشتہ ہے ؟

بیانی (1)

شوہر (2)

س (3)

م (4)

Options :

212507119113:1
212507119114:2
212507119115:3
212507119116:4

Question Number : 295 Question Id : 21250719780 Question Type : MCQ Option Shuffling : No Is Question Mandatory : No Calculator : None
Response Time : N.A Think Time : N.A Minimum Instruction Time : 0

Correct Marks : 5 Wrong Marks : 1

Question Key Details :

Key	Value
Comprehension	MCQ

In a month of 31 days, third Friday falls on 17th. What will be the last day of the month ?

(1) Wednesday

(2) Thursday

(3) Friday

(4) Saturday

Options :

212507119117:1
212507119118:2
212507119119:3
212507119120:4

Question Number : 295 Question Id : 21250719780 Question Type : MCQ Option Shuffling : No Is Question Mandatory : No Calculator : None
Response Time : N.A Think Time : N.A Minimum Instruction Time : 0

Correct Marks : 5 Wrong Marks : 1

Question Key Details :

Key	Value
Comprehension	MCQ

31 दिनों के एक माह में तीसरा शुक्रवार 17 तारीख को आता है। तो इसी माह का अंतिम दिन क्या होगा?

- (1) बुधवार
- (2) बृहस्पतिवार
- (3) शुक्रवार
- (4) शनिवार

Options :

112807119117 1
112807119118 2
112807119119 3
112807119120 4

Question Number : 295 Question Id : 21280729780 Question Type : MCQ Option Shuffling : No Is Question Mandatory : No Calculator : None
Response Time : N.A Think Time : N.A Minimum Instruction Time : 0

Correct Marks : 5 Wrong Marks : 1

Question Key Details :

Key	Value
Comprehension	MCQ

31 दिनिया माह एटा त्रुतीया शनिवारतो 17 तारिखे परिछे। माहतेर शेखर दिनतो कि वार ह'व ?

- (1) बुधवार
- (2) बृहस्पतिवार
- (3) शुक्रवार
- (4) शनिवार

Options :

112807119117 1
112807119118 2
112807119119 3
112807119120 4

Question Number : 295 Question Id : 21280729780 Question Type : MCQ Option Shuffling : No Is Question Mandatory : No Calculator : None
Response Time : N.A Think Time : N.A Minimum Instruction Time : 0

Correct Marks : 5 Wrong Marks : 1

Question Key Details :

Key	Value
Comprehension	MCQ

31 दिनेर कोनो मासे, त्रुतीया शुक्रवार पडेछिल 17 ते। ताहले मासेर शेख दिन की वार हवे ?

- (1) बुधवार
- (2) बृहस्पतिवार
- (3) शुक्रवार
- (4) शनिवार

Options :

112807119117 1
112807119118 2
112807119119 3
112807119120 4

Question Number : 295 Question Id : 21280729780 Question Type : MCQ Option Shuffling : No Is Question Mandatory : No Calculator : None
Response Time : N.A Think Time : N.A Minimum Instruction Time : 0

Correct Marks : 5 Wrong Marks : 1

Question Key Details :

Key	Value
Comprehension	MCQ

31 દિવસોના મહિના માં, ત્રીજો શુક્રવાર 17 થી એ આવે છે. મહિનાનો છેલ્લો દિવસ શું હશે?

- (1) બુધવાર
- (2) ગુરુવાર
- (3) શુક્રવાર
- (4) સનિવાર

Options :

- 212807119117 : 1
- 212807119118 : 2
- 212807119119 : 3
- 212807119120 : 4

Question Number : 295 Question Id : 21280719780 Question Type : MCQ Option Shuffling : No Is Question Mandatory : No Calculator : None Response Time : N.A Think Time : N.A Minimum Instruction Time : 0

Correct Marks : 5 Wrong Marks : 1

Question Key Details :

Key	Value
Comprehension	MCQ

31 દિવસોના મહિના માં, ત્રીજો શુક્રવાર 17 થી એ આવે છે. મહિનાનો છેલ્લો દિવસ શું હશે?

- (1) બુધવાર
- (2) ગુરુવાર
- (3) શુક્રવાર
- (4) સનિવાર

Options :

- 212807119117 : 1
- 212807119118 : 2
- 212807119119 : 3
- 212807119120 : 4

Question Number : 295 Question Id : 21280719780 Question Type : MCQ Option Shuffling : No Is Question Mandatory : No Calculator : None Response Time : N.A Think Time : N.A Minimum Instruction Time : 0

Correct Marks : 5 Wrong Marks : 1

Question Key Details :

Key	Value
Comprehension	MCQ

31 દિવસોના મહિના માં, ત્રીજો શુક્રવાર 17 થી એ આવે છે. મહિનાનો છેલ્લો દિવસ શું હશે?

- (1) બુધવાર
- (2) ગુરુવાર
- (3) શુક્રવાર
- (4) સનિવાર

Options :

- 212807119117 : 1
- 212807119118 : 2
- 212807119119 : 3
- 212807119120 : 4

Question Number : 295 Question Id : 21280719780 Question Type : MCQ Option Shuffling : No Is Question Mandatory : No Calculator : None Response Time : N.A Think Time : N.A Minimum Instruction Time : 0

Correct Marks : 5 Wrong Marks : 1

Question Key Details :

Key	Value
Comprehension	MCQ

31 ദിവസങ്ങളുള്ള ഒരു മാസത്തിലെ മൂന്നാമത്തെ വെള്ളിയാഴ്ച 17-ാം ആണ്ടെങ്കിൽ, ആ മാസത്തിലെ അവസാനത്തെ ദിവസം താഴെ കൊടുത്തിട്ടുള്ളതിൽ ഏതായിരിക്കും ?

- (1) ബുധനാഴ്ച
- (2) വ്യാഴാഴ്ച
- (3) വെള്ളിയാഴ്ച
- (4) ശനിയാഴ്ച

Options :

212807119117 1

212807119118 2

212807119119 3

212807119120 4

Question Number : 295 Question Id : 21280729780 Question Type : MCQ Option Shuffling : No Is Question Mandatory : No Calculator : None Response Time : N.A Think Time : N.A Minimum Instruction Time : 0

Correct Marks : 5 Wrong Marks : 1

Question Key Details :

Key	Value
Comprehension	MCQ

ଗୋଟିଏ വാചക 31 ଦିനରେ ବୁଧൻ ଶୁକ୍ରବାର 17 ତାରିଖରେ ପଢ଼ିଛି । ତେବେ ୟାହାର କ୍ଷେତ୍ର ତାରିଖରେ କେଉଁବାର ପଢ଼ିବ ?

- (1) ବୁଧବାର
- (2) ଶୁକ୍ରବାର
- (3) ଶୁକ୍ରବାର
- (4) ଶନିବାର

Options :

212807119117 1

212807119118 2

212807119119 3

212807119120 4

Question Number : 295 Question Id : 21280729780 Question Type : MCQ Option Shuffling : No Is Question Mandatory : No Calculator : None Response Time : N.A Think Time : N.A Minimum Instruction Time : 0

Correct Marks : 5 Wrong Marks : 1

Question Key Details :

Key	Value
Comprehension	MCQ

31 ਦਿਨਾਂ ਦੇ ਇਕ ਮਹੀਨੇ ਵਿਚ, ਤੀਜਾਂ ਸ਼ੁੱਕਰਵਾਰ 17 ਨੂੰ ਆਉਂਦਾ ਹੈ । ਉਸ ਮਹੀਨੇ ਦਾ ਆਖਰੀ ਦਿਨ ਕਿਹੜਾ ਹੋਵੇਗਾ ?

- (1) ਬੁੱਧਵਾਰ
- (2) ਵੀਰਵਾਰ
- (3) ਸ਼ੁੱਕਰਵਾਰ
- (4) ਸ਼ਨੀਚਵਾਰ

Options :

212807119117:1
212807119118:2
212807119119:3
212807119120:4

Question Number : 295 Question Id : 21280729780 Question Type : MCQ Option Shuffling : No Is Question Mandatory : No Calculator : None
Response Time : N.A Think Time : N.A Minimum Instruction Time : 0

Correct Marks : 5 Wrong Marks : 1

Question Key Details :

Key	Value
Comprehension	MCQ

31 நாட்கள் கொண்ட மாதத்தில் மூன்றாவது வெள்ளிக்கிழமை 17ம் தேதி வருகிறது. மாதத்தின் கடைசி நாள் எது?

- (1) புதன்கிழமை
- (2) வியாழக்கிழமை
- (3) வெள்ளிக்கிழமை
- (4) சனிக்கிழமை

Options :

212807119117:1
212807119118:2
212807119119:3
212807119120:4

Question Number : 295 Question Id : 21280729780 Question Type : MCQ Option Shuffling : No Is Question Mandatory : No Calculator : None
Response Time : N.A Think Time : N.A Minimum Instruction Time : 0

Correct Marks : 5 Wrong Marks : 1

Question Key Details :

Key	Value
Comprehension	MCQ

31 ரூபாய் செலவு, மூடவ சூத்ரவாரம் 17 வ ரூபாய். 8 செலவு விபரி ரூபாய் ఏమిటి ?

- (1) బుధవారం
- (2) గురువారం
- (3) శుక్రవారం
- (4) శనివారం

Options :

212807119117:1
212807119118:2
212807119119:3
212807119120:4

Question Number : 295 Question Id : 21280729780 Question Type : MCQ Option Shuffling : No Is Question Mandatory : No Calculator : None
Response Time : N.A Think Time : N.A Minimum Instruction Time : 0

Correct Marks : 5 Wrong Marks : 1

Question Key Details :

Key	Value
Comprehension	MCQ

اگتیس دنوں کے مہینے میں تیسرا مہینہ سترہویں دن پڑتا ہے۔ مہینے کا آخری دن کون سا ہوگا ؟

(1) بدھ

(2) جمعرات

(3) جمعہ

(4) منگل

Options :

212807119117 1

212807119118 2

212807119119 3

212807119120 4

Question Number : 296 Question Id : 21280729781 Question Type : MCQ Option Shuffling : No Is Question Mandatory : No Calculator : None
Response Time : N.A Think Time : N.A Minimum Instruction Time : 0

Correct Marks : 5 Wrong Marks : 1

Question Key Details :

Key	Value
Comprehension	MCQ

Find the angle traced by hour hand of a correct clock between 7'O Clock and 1'O Clock ?

(1) 180°

(2) 150°

(3) 175°

(4) 200°

Options :

212807119121 1

212807119122 2

212807119123 3

212807119124 4

Question Number : 296 Question Id : 21280729781 Question Type : MCQ Option Shuffling : No Is Question Mandatory : No Calculator : None
Response Time : N.A Think Time : N.A Minimum Instruction Time : 0

Correct Marks : 5 Wrong Marks : 1

Question Key Details :

Key	Value
Comprehension	MCQ

सही समय वाली घड़ी में 7 बजे और 1 बजे के बीच घट्टे वाली सुई के संकेत का कोण ज्ञात कीजिए ?

(1) 180°

(2) 150°

(3) 175°

(4) 200°

Options :

212807119121 1

212807119122 2

212807119123 3

212807119124 4

Question Number : 296 Question Id : 21280729781 Question Type : MCQ Option Shuffling : No Is Question Mandatory : No Calculator : None
Response Time : N.A Think Time : N.A Minimum Instruction Time : 0

Correct Marks : 5 Wrong Marks : 1

Question Key Details :

Key	Value
Comprehension	MCQ

এটা ঘড়ির 7 টা বজাত আৰু 1 টা বজাত থকা খণ্টা কাঁটার মাজৰ কোণটো হ'ব ?

- (1) 180°
 (2) 150°
 (3) 175°
 (4) 200°

Options :

- 212807119121 1
 212807119122 1
 212807119123 3
 212807119124 4

Question Number : 296 Question Id : 21280719781 Question Type : MCQ Option Shuffling : No Is Question Mandatory : No Calculator : None
 Response Time : N.A Think Time : N.A Minimum Instruction Time : 0

Correct Marks : 5 Wrong Marks : 1

Question Key Details :

Key	Value
Comprehension	MCQ

একটি নিৰ্ভুল ঘড়িৰ 7 টা ও 1 টা বাজলে খণ্টাৰ কাঁটাৰ মध्ये উৎপন্ন কোণের মান বুজি বার কৰো।

- (1) 180°
 (2) 150°
 (3) 175°
 (4) 200°

Options :

- 212807119121 1
 212807119122 1
 212807119123 3
 212807119124 4

Question Number : 296 Question Id : 21280719781 Question Type : MCQ Option Shuffling : No Is Question Mandatory : No Calculator : None
 Response Time : N.A Think Time : N.A Minimum Instruction Time : 0

Correct Marks : 5 Wrong Marks : 1

Question Key Details :

Key	Value
Comprehension	MCQ

7 বাজে আৰু 1 বাজে ঘড়িৰ কাঁটাৰ মাজৰ কোণটোৰ মান বুজি বার কৰো ?

- (1) 180°
 (2) 150°
 (3) 175°
 (4) 200°

Options :

- 212807119121 1
 212807119122 1
 212807119123 3
 212807119124 4

Question Number : 296 Question Id : 21280719781 Question Type : MCQ Option Shuffling : No Is Question Mandatory : No Calculator : None
 Response Time : N.A Think Time : N.A Minimum Instruction Time : 0

Correct Marks : 5 Wrong Marks : 1

Question Key Details :

Key	Value
-----	-------

Comprehension	MCQ
---------------	-----

ಒಂದು ಸರಿಯಾದ ಗಡಿಯಾರದ 7 ಗಂಟೆ ಮತ್ತು 1 ಗಂಟೆ ನಡುವೆ ಗಂಟೆ ಮುಚ್ಚು ಪತ್ತೆ ಹಚ್ಚುವ ಕೋನವನ್ನು ಗುರುತಿಸಿ ?

- (1) 180°
- (2) 150°
- (3) 175°
- (4) 200°

Options :

- 212807119121 1
- 212807119122 2
- 212807119123 3
- 212807119124 4

Question Number : 296 Question Id : 21280729781 Question Type : MCQ Option Shuffling : No Is Question Mandatory : No Calculator : None
Response Time : N.A Think Time : N.A Minimum Instruction Time : 0

Correct Marks : 5 Wrong Marks : 1

Question Key Details :

Key	Value
Comprehension	MCQ

7 वाजल्यापासून ते 1 वाजेपर्यंत वास काटा किती अंश कोनात फिरतो?

- (1) 180°
- (2) 150°
- (3) 175°
- (4) 200°

Options :

- 212807119121 1
- 212807119122 2
- 212807119123 3
- 212807119124 4

Question Number : 296 Question Id : 21280729781 Question Type : MCQ Option Shuffling : No Is Question Mandatory : No Calculator : None
Response Time : N.A Think Time : N.A Minimum Instruction Time : 0

Correct Marks : 5 Wrong Marks : 1

Question Key Details :

Key	Value
Comprehension	MCQ

ഒരു മേളംകളിന്റെ മണിക്കൂർ സൂചി 7 മണിയിൽ നിന്ന് 1 മണിയിലെത്തുമ്പോൾ രൂപപ്പെടുന്ന കോണിന്റെ അളവ് എത്ര ?

- (1) 180°
- (2) 150°
- (3) 175°
- (4) 200°

Options :

- 212807119121 1
- 212807119122 2
- 212807119123 3
- 212807119124 4

Question Number : 296 Question Id : 21280729781 Question Type : MCQ Option Shuffling : No Is Question Mandatory : No Calculator : None
Response Time : N.A Think Time : N.A Minimum Instruction Time : 0

Correct Marks : 5 Wrong Marks : 1

Question Key Details :

Key	Value

Correct Marks : 5 Wrong Marks : 1

Question Key Details :

Key	Value
Comprehension	MCQ

7 گونڈوں میں سے 1 گونڈا مہذب گنڈیوں میں سے 1 گونڈا مہذب اور 5 گونڈے گنڈیوں میں سے 1 گونڈا مہذب کی تعداد کیا ہے ؟

- (1) 180°
(2) 150°
(3) 175°
(4) 200°

Options :

212807119121 1
212807119122 2
212807119123 3
212807119124 4

Question Number : 296 Question Id : 21280719781 Question Type : MCQ Option Shuffling : No Is Question Mandatory : No Calculator : None
Response Time : N.A Think Time : N.A Minimum Instruction Time : 0

Correct Marks : 5 Wrong Marks : 1

Question Key Details :

Key	Value
Comprehension	MCQ

1 بیجے اور 7 بیجے کے درمیان ایک درست گزری کے گھنٹے کا ٹاکا (اوہ کی دریافت کریں۔

- 180° (1)
150° (2)
175° (3)
200° (4)

Options :

212807119121 1
212807119122 2
212807119123 3
212807119124 4

Question Number : 297 Question Id : 21280719782 Question Type : MCQ Option Shuffling : No Is Question Mandatory : No Calculator : None
Response Time : N.A Think Time : N.A Minimum Instruction Time : 0

Correct Marks : 5 Wrong Marks : 1

Question Key Details :

Key	Value
Comprehension	MCQ

If MACHINE is coded as 15-3-5-10-11-16-7. How will you code DRAGON ?

- (1) 20-6-9-3-17-16
(2) 6-20-9-3-16-17
(3) 6-20-3-9-17-16
(4) 6-20-5-9-15-17

Options :

212807119121 1
212807119122 2
212807119123 3
212807119124 4

Question Number : 297 Question Id : 212807119123 Question Type : MCQ Option Shuffling : No Is Question Mandatory : No Calculator : None
Response Time : N.A Think Time : N.A Minimum Instruction Time : 0

Correct Marks : 5 Wrong Marks : 1

Question Key Details :

Key	Value
Comprehension	MCQ

यदि MACHINE को 15-3-5-10-11-16-7 के रूप में कूटबद्ध किया जाता है तो आप DRAGON को किस रूप में कूटबद्ध करेंगे ?

- (1) 20-6-9-3-17-16
- (2) 6-20-9-3-16-17
- (3) 6-20-3-9-17-16
- (4) 6-20-5-9-15-17

Options :

212807119123 1

212807119124 1

212807119125 3

212807119126 4

Question Number : 297 Question Id : 212807119124 Question Type : MCQ Option Shuffling : No Is Question Mandatory : No Calculator : None
Response Time : N.A Think Time : N.A Minimum Instruction Time : 0

Correct Marks : 5 Wrong Marks : 1

Question Key Details :

Key	Value
Comprehension	MCQ

যদি MACHINE ব কোড হচ্ছে 15-3-5-10-11-16-7 তেন্তে DRAGON ব কোডটো কি হ'ব ?

- (1) 20-6-9-3-17-16
- (2) 6-20-9-3-16-17
- (3) 6-20-3-9-17-16
- (4) 6-20-5-9-15-17

Options :

212807119123 1

212807119124 1

212807119125 3

212807119126 4

Question Number : 297 Question Id : 212807119125 Question Type : MCQ Option Shuffling : No Is Question Mandatory : No Calculator : None
Response Time : N.A Think Time : N.A Minimum Instruction Time : 0

Correct Marks : 5 Wrong Marks : 1

Question Key Details :

Key	Value
Comprehension	MCQ

যদি MACHINE এর সাংকেতিক 15-3-5-10-11-16-7 হয়। DRAGON এর সাংকেতিক কী হবে ?

- (1) 20-6-9-3-17-16
- (2) 6-20-9-3-16-17
- (3) 6-20-3-9-17-16
- (4) 6-20-5-9-15-17

Options :

212807119123 1

212807119124 1

212807119125 3

212807119126 4

Question Number : 297 Question Id : 21280719782 Question Type : MCQ Option Shuffling : No Is Question Mandatory : No Calculator : None
Response Time : N.A Think Time : N.A Minimum Instruction Time : 0

Correct Marks : 5 Wrong Marks : 1

Question Key Details :

Key	Value
Comprehension	MCQ

जे MACHINE ने 15-3-5-10-11-16-17 तरीके कोड करवायां आहे तो, DRAGON ने तसे केली रीते कोड करणे?

- (1) 20-6-9-3-17-16
- (2) 6-20-9-3-16-17
- (3) 6-20-3-9-17-16
- (4) 6-20-5-9-15-17

Options :

21280719125 1

21280719126 2

21280719127 3

21280719128 4

Question Number : 297 Question Id : 21280719782 Question Type : MCQ Option Shuffling : No Is Question Mandatory : No Calculator : None
Response Time : N.A Think Time : N.A Minimum Instruction Time : 0

Correct Marks : 5 Wrong Marks : 1

Question Key Details :

Key	Value
Comprehension	MCQ

MACHINE च्या 15-3-5-10-11-16-7 अंदा संपूर्णितकर, DRAGON च्या विरुद्ध धरणी संपूर्णितकर ?

- (1) 20-6-9-3-17-16
- (2) 6-20-9-3-16-17
- (3) 6-20-3-9-17-16
- (4) 6-20-5-9-15-17

Options :

21280719125 1

21280719126 2

21280719127 3

21280719128 4

Question Number : 297 Question Id : 21280719782 Question Type : MCQ Option Shuffling : No Is Question Mandatory : No Calculator : None
Response Time : N.A Think Time : N.A Minimum Instruction Time : 0

Correct Marks : 5 Wrong Marks : 1

Question Key Details :

Key	Value
Comprehension	MCQ

जर MACHINE चा संकेतांक 15-3-5-10-11-16-7 असेल तर DRAGON चा संकेतांक काय असेल?

- (1) 20-6-9-3-17-16
- (2) 6-20-9-3-16-17
- (3) 6-20-3-9-17-16
- (4) 6-20-5-9-15-17

Options :

21280719125 1

21280719126 2

21280719127 3

21280719128 4

Question Number : 297 Question Id : 21280719782 Question Type : MCQ Option Shuffling : No Is Question Mandatory : No Calculator : None Response Time : N.A Think Time : N.A Minimum Instruction Time : 0

Correct Marks : 5 Wrong Marks : 1

Question Key Details :

Key	Value
Comprehension	MCQ

MACHINE എന്നത് 15-3-5-10-11-16-7 എന്ന എഴുതിയാൽ DRAGON എന്നത് എങ്ങനെ എഴുതും ?

- (1) 20-6-9-3-17-16
- (2) 6-20-9-3-16-17
- (3) 6-20-3-9-17-16
- (4) 6-20-5-9-15-17

Options :

212807119125-1

212807119126-2

212807119127-3

212807119128-4

Question Number : 297 Question Id : 21280719782 Question Type : MCQ Option Shuffling : No Is Question Mandatory : No Calculator : None Response Time : N.A Think Time : N.A Minimum Instruction Time : 0

Correct Marks : 5 Wrong Marks : 1

Question Key Details :

Key	Value
Comprehension	MCQ

ଯଦି MACHINE ର ସଙ୍କେତିକ ସଂଖ୍ୟା 15-3-5-10-11-16-7। ତେବେ DRAGON ର ସଙ୍କେତିକ ସଂଖ୍ୟା କେଉଁଟି ?

- (1) 20-6-9-3-17-16
- (2) 6-20-9-3-16-17
- (3) 6-20-3-9-17-16
- (4) 6-20-5-9-15-17

Options :

212807119125-1

212807119126-2

212807119127-3

212807119128-4

Question Number : 297 Question Id : 21280719782 Question Type : MCQ Option Shuffling : No Is Question Mandatory : No Calculator : None Response Time : N.A Think Time : N.A Minimum Instruction Time : 0

Correct Marks : 5 Wrong Marks : 1

Question Key Details :

Key	Value
Comprehension	MCQ

ਅਗਰ MACHINE ਨੂੰ 15-3-5-10-11-16-7 ਦੇ ਤੌਰ ਤੇ ਕੋਡਬੱਧ ਕੀਤਾ ਤਾਂ ਤੁਸੀਂ DRAGON ਦਾ ਕੋਡ ਕਿਵੇਂ ਕਰੋਗੇ ?

- (1) 20-6-9-3-17-16
- (2) 6-20-9-3-16-17
- (3) 6-20-3-9-17-16
- (4) 6-20-5-9-15-17

Options :

212807119125-1

212807119126-2

212807119127-3

212807119128-4

Question Number : 297 Question Id : 21280729782 Question Type : MCQ Option Shuffling : No Is Question Mandatory : No Calculator : None
Response Time : N.A Think Time : N.A Minimum Instruction Time : 0

Correct Marks : 5 Wrong Marks : 1

Question Key Details :

Key	Value
Comprehension	MCQ

MACHINE 15-3-5-10-11-16-7 என குறியிடப்பட்டால், DRAGON குறியீட்டை எவ்வாறு குறியிடுவீர்கள்?

- (1) 20-6-9-3-17-16
- (2) 6-20-9-3-16-17
- (3) 6-20-3-9-17-16
- (4) 6-20-5-9-15-17

Options :

212807119125 1

212807119126 2

212807119127 3

212807119128 4

Question Number : 297 Question Id : 21280729782 Question Type : MCQ Option Shuffling : No Is Question Mandatory : No Calculator : None
Response Time : N.A Think Time : N.A Minimum Instruction Time : 0

Correct Marks : 5 Wrong Marks : 1

Question Key Details :

Key	Value
Comprehension	MCQ

MACHINE 15-3-5-10-11-16-7 కోడెల రాష్ట్ర DRAGON కోడ్ ఏమిటి ?

- (1) 20-6-9-3-17-16
- (2) 6-20-9-3-16-17
- (3) 6-20-3-9-17-16
- (4) 6-20-5-9-15-17

Options :

212807119125 1

212807119126 2

212807119127 3

212807119128 4

Question Number : 297 Question Id : 21280729782 Question Type : MCQ Option Shuffling : No Is Question Mandatory : No Calculator : None
Response Time : N.A Think Time : N.A Minimum Instruction Time : 0

Correct Marks : 5 Wrong Marks : 1

Question Key Details :

Key	Value
Comprehension	MCQ

DRAGON آپ کو کیا جائے گا؟ 15-3-5-10-11-16-7 MACHINE

- 20-6-9-3-17-16 (1)
- 6-20-9-3-16-17 (2)
- 6-20-3-9-17-16 (3)
- 6-20-5-9-15-17 (4)

Options :

212807119125:1
212807119126:2
212807119127:3
212807119128:4

Question Number : 298 Question Id : 21280729783 Question Type : MCQ Option Shuffling : No Is Question Mandatory : No Calculator : None
Response Time : N.A Think Time : N.A Minimum Instruction Time : 0
Correct Marks : 5 Wrong Marks : 1

Question Key Details :

Key	Value
Comprehension	MCQ

How many son's does W have ?

Statements : I X's father has three children.

II Y is X's brother and son of W.

Read the question & statements (I & II). Decide whether the data provides in the statement are sufficient to answer the question.

- (1) If I alone is sufficient, while II alone is not sufficient
- (2) If II alone is sufficient, while I alone is not sufficient
- (3) If I & II together are not sufficient
- (4) If both I & II together are necessary to answer the questions

Options :

212807119129:1
212807119130:2
212807119131:3
212807119132:4

Question Number : 298 Question Id : 21280729783 Question Type : MCQ Option Shuffling : No Is Question Mandatory : No Calculator : None
Response Time : N.A Think Time : N.A Minimum Instruction Time : 0
Correct Marks : 5 Wrong Marks : 1

Question Key Details :

Key	Value
Comprehension	MCQ

W के कितने पुत्र हैं ?

कथन : I X के पिता के तीन बच्चे हैं।

II Y, X का भाई है और W का पुत्र है।

प्रश्न और कथन (I और II) पढ़ें। निर्णय कीजिए कि क्या कथन में दिए गए आँकड़े प्रश्न का उत्तर देने के लिए पर्याप्त हैं।

- (1) यदि केवल कथन - I पर्याप्त है, तो केवल कथन - II पर्याप्त नहीं है।
- (2) यदि केवल कथन - II पर्याप्त है, तो केवल कथन - I पर्याप्त नहीं है।
- (3) यदि कथन - I और II मिलकर पर्याप्त नहीं है।
- (4) यदि कथन - I और II मिलकर प्रश्न का उत्तर देने के लिए आवश्यक नहीं हैं।

Options :

212807119129:1
212807119130:2
212807119131:3
212807119132:4

Question Number : 298 Question Id : 21280729783 Question Type : MCQ Option Shuffling : No Is Question Mandatory : No Calculator : None
Response Time : N.A Think Time : N.A Minimum Instruction Time : 0
Correct Marks : 5 Wrong Marks : 1

Question Key Details :

Key	Value
Comprehension	MCQ

'W' ব কেইজন পুত্র আছে ?

উক্তি : I 'X' বাপেকৰ 3 টা সন্তান

II 'Y' হৈছে 'X' ব ভায়েক আৰু 'W' ব পুত্ৰক।

প্রশ্নটো আৰু উক্তি কেইটা (I আৰু II) পঢ়া আৰু সিদ্ধান্ত পোৱা যে উক্তিসমূহত দিয়া তথ্যবিশি প্রশ্নটোৰ উত্তৰ দিবলৈ যথেষ্ট নে নাই।

- (1) যদি I অকলে যথেষ্ট, তেন্তে II অকলে যথেষ্ট নহয়।
- (2) যদি II অকলে যথেষ্ট, তেন্তে I অকলে যথেষ্ট নহয়।
- (3) যদি I আৰু II একেলগে যথেষ্ট নহয়।
- (4) যদি I আৰু II দুয়োটাৰে যথেষ্ট উত্তৰ দিবলৈ যথেষ্ট।

Options :

- 212807119129 1
212807119130 2
212807119131 3
212807119132 4

Question Number : 298 Question Id : 21280729783 Question Type : MCQ Option Shuffling : No Is Question Mandatory : No Calculator : None
Response Time : N.A Think Time : N.A Minimum Instruction Time : 0

Correct Marks : 5 Wrong Marks : 1

Question Key Details :

Key	Value
Comprehension	MCQ

'W' এর কতগুলো পুত্র আছে ?

উক্তি : I 'X' এর পিতার তিন সন্তান।

উক্তি : II 'Y' হল 'X' এর ভাই এবং 'W' এর পুত্র।

প্রশ্ন ও বিবৃতি (I ও II) পড়ো। যে তথ্য প্রদান করা হয়েছে বিবৃতিতে তা প্রশ্নটির উত্তর দেওয়ার জন্য যথেষ্ট।

- (1) যদি I একাই যথেষ্ট, যেখানে II একাই যথেষ্ট নয়।
- (2) যদি II একাই যথেষ্ট, যেখানে I একাই যথেষ্ট নয়।
- (3) যদি I এবং II একত্রে যথেষ্ট নয়।
- (4) যদি উত্তর I এবং II একত্রে প্রয়োজনীয় প্রশ্নটি উত্তর দেওয়ার জন্য

Options :

- 212807119129 1
212807119130 2
212807119131 3
212807119132 4

Question Number : 298 Question Id : 21280729783 Question Type : MCQ Option Shuffling : No Is Question Mandatory : No Calculator : None
Response Time : N.A Think Time : N.A Minimum Instruction Time : 0

Correct Marks : 5 Wrong Marks : 1

Question Key Details :

Key	Value
Comprehension	MCQ

W કેટલા પુત્રો ધરાવે છે?

વિધાન : I X ના પિતાને ત્રણ બાળકો છે.

વિધાન : II Y એ X નો ભાઈ અને W નો પુત્ર છે.

પ્રશ્ન અને વિધાનો (I & II) વાંચો. નિવેદનમાં આપેલ માહિતી પ્રશ્નનો જવાબ આપવા માટે પૂરતી છે કે કેમ તે નક્કી કરો.

- (1) બે I એકલો પૂરતો છે, જ્યારે II એકલો પૂરતો નથી.
- (2) બે II એકલો પૂરતો છે, જ્યારે I એકલો પૂરતો નથી.
- (3) I અને II સાથે પૂરતો નથી.
- (4) બંને I & II સાથે પ્રશ્નોના જવાબ માટે જરૂરી છે.

Options :

212807119129 : 1

212807119130 : 2

212807119131 : 3

212807119132 : 4

Question Number : 298 Question Id : 21280729783 Question Type : MCQ Option Shuffling : No Is Question Mandatory : No Calculator : None
Response Time : N/A Think Time : N/A Minimum Instruction Time : 0

Correct Marks : 5 Wrong Marks : 1

Question Key Details :

Key	Value
Comprehension	MCQ

W એટલું પુત્રોને, કહેવો છે ?

વિધાન I : X ને ત્રણ પુત્રો મળ્યા છે.

વિધાન II : Y એ X નો ભાઈ અને W નો પુત્ર છે.

પ્રશ્ન અને વિધાનો (I અને II) વાંચો. નિવેદનમાં આપેલ માહિતી પ્રશ્નનો જવાબ આપવા માટે પૂરતી છે કે કેમ તે નક્કી કરો.

- (1) I માત્ર સાચા છે, II માત્ર સાચાં નથી.
- (2) II માત્ર સાચા છે, I માત્ર સાચાં નથી.
- (3) I અને II બંને સાચાં નથી.
- (4) I અને II બંને સાચાં છે.

Options :

212807119129 : 1

212807119130 : 2

212807119131 : 3

212807119132 : 4

Question Number : 298 Question Id : 21280729783 Question Type : MCQ Option Shuffling : No Is Question Mandatory : No Calculator : None
Response Time : N/A Think Time : N/A Minimum Instruction Time : 0

Correct Marks : 5 Wrong Marks : 1

Question Key Details :

Key	Value
Comprehension	MCQ

W ਕੇ ਕੋਈ ਸਾਬਕਾ ਪੁੱਤਰ ਹੈ ?

ਕਥਨ I : X ਨੇ ਕਮਰਾ 3 ਨੂੰ ਖੋਲ੍ਹਿਆ।

ਕਥਨ II : Y ਨੇ X ਨੂੰ X ਦੇ ਕਮਰੇ ਵੱਲ W ਨੂੰ ਦਿੱਤਾ।

ਪੁੱਤਰ ਵੱਲੋਂ ਕਥਨ (I ਵਾਂਗ II) ਨੂੰ ਪੜ੍ਹੋ। ਖੋਲ੍ਹੇ ਕਮਰੇ ਵਿੱਚ ਕੋਈ ਵੀ ਸਾਬਕਾ ਪੁੱਤਰ ਨਹੀਂ ਹੈ।

- (1) ਕਥਨ I ਵੱਲੋਂ ਕਥਨ II ਵੱਲੋਂ ਕਥਨ III ਵੱਲੋਂ
- (2) ਕਥਨ II ਵੱਲੋਂ ਕਥਨ I ਵੱਲੋਂ ਕਥਨ III ਵੱਲੋਂ
- (3) ਕਥਨ I ਵਾਂਗ II ਵੱਲੋਂ ਕਥਨ III ਵੱਲੋਂ
- (4) ਕਥਨ III ਵੱਲੋਂ ਕਥਨ I ਵਾਂਗ II ਵੱਲੋਂ ਕਥਨ III ਵੱਲੋਂ

Options :

212807119129 1

212807119130 2

212807119131 3

212807119132 4

Question Number : 298 Question Id : 21280719783 Question Type : MCQ Option Shuffling : No Is Question Mandatory : No Calculator : None
Response Time : N.A Think Time : N.A Minimum Instruction Time : 0

Correct Marks : 5 Wrong Marks : 1

Question Key Details :

Key	Value
Comprehension	MCQ

W ਦੇ ਕਿੰਨੇ ਪੁੱਤਰ ਹਨ?

ਬਿਆਨ : I X's ਪਿਤਾ ਦੇ ਤਿੰਨ ਬੱਚੇ ਹਨ।

ਬਿਆਨ : II Y X's ਦਾ ਭਰਾ ਅਤੇ W ਦਾ ਬੇਟਾ ਹੈ।

ਹੇਠਾਂ ਦਿੱਤੇ ਪ੍ਰਸ਼ਨ ਅਤੇ ਬਿਆਨ (I ਅਤੇ II) ਪੜ੍ਹੋ। ਫੈਸਲਾ ਕਰੋ ਕਿ ਬਿਆਨ ਵਿੱਚ ਦਿੱਤਾ ਗਿਆ ਡਾਟਾ ਸਵਾਲ ਦਾ ਜਵਾਬ ਦੇਣ ਲਈ ਕਾਫੀ ਹੈ।

- (1) ਅਗਰ I ਇਕੱਲਾ ਕਾਫੀ ਹੈ, ਜਦੋਂ ਕਿ ਇਕੱਲਾ II ਇਸ ਲਈ ਕਾਫੀ ਨਹੀਂ ਹੈ।
- (2) ਅਗਰ II ਇਕੱਲਾ ਕਾਫੀ ਹੈ, ਜਦੋਂ ਕਿ I ਇਕੱਲਾ ਕਾਫੀ ਨਹੀਂ ਹੈ।
- (3) ਅਗਰ I ਅਤੇ II ਦੋਵੇਂ ਕਾਫੀ ਨਹੀਂ ਹਨ।
- (4) ਅਗਰ ਦੋਵੇਂ I ਅਤੇ II ਇਕੱਠੇ ਸਵਾਲ ਦਾ ਜਵਾਬ ਦੇਣ ਲਈ ਜ਼ਰੂਰੀ ਹਨ।

Options :

212807119129 1

212807119130 2

212807119131 3

212807119132 4

Question Number : 295 Question Id : 21280719783 Question Type : MCQ Option Shuffling : No Is Question Mandatory : No Calculator : None
Response Time : N.A Think Time : N.A Minimum Instruction Time : 0

Correct Marks : 5 Wrong Marks : 1

Question Key Details :

Key	Value
Comprehension	MCQ

பிள்ளு-க்கு எத்தனை மகன்கள்?

வாக்குமூலம் : I எக்ஸின் தந்தைக்கு மூன்று பிள்ளைகள்.

II Y என்பவர் X இன் சகோதரர் மற்றும் W இன் மகன் ஆவார்.

கேள்வி மற்றும் அறிக்கைகளைப் படியுங்கள் (& "). கேள்விக்கு பதிலளிக்க அறிக்கையில் உள்ள தரவுகள் போதுமானதா என்பதை தீர்மானிக்கவும்.

- (1) I மட்டும் போதுமாயிருப்பின், II மட்டும் போதாது.
- (2) II மட்டும் போதுமானது, நான் மட்டும் போதாது.
- (3) I & II ஒன்றாக போதுமானதாக இல்லை என்றால்.
- (4) கேள்விகளுக்கு பதிலளிக்க I மற்றும் II இரண்டும் ஒன்றாக தேவைப்பட்டால்.

Options :

- 212807119129 1
- 212807119130 2
- 212807119131 3
- 212807119132 4

Question Number : 298 Question Id : 21280729783 Question Type : MCQ Option Shuffling : No Is Question Mandatory : No Calculator : None Response Time : N.A Think Time : N.A Minimum Instruction Time : 0

Correct Marks : 5 Wrong Marks : 1

Question Key Details :

Key	Value
Comprehension	MCQ

W కి ఎంత మంది కొడుకులున్నారు ?

ప్రకటన I : X యొక్క తండ్రికి ముగ్గురు పిల్లలు

ప్రకటన II : Y అతను X యొక్క సహోదరుడు మరియు W కొడుకు.

ఇచ్చిన ప్రకటనలలోని దత్తాంశం ప్రశ్నకు సమాధానమివ్వడానికి సరిపోతుందా లేదా గుర్తించండి.

- (1) I స్వతంత్రంగా సరిపోతుంది కాగా II స్వతంత్రంగా సరిపోదు.
- (2) II స్వతంత్రంగా సరిపోతుంది కాగా I స్వతంత్రంగా సరిపోదు.
- (3) I & II కలిసి కూడా సరిపోవు.
- (4) I & II రెండూ ప్రశ్నకు సమాధానమివ్వడానికి అవసరం.

Options :

- 212807119129 1
- 212807119130 2
- 212807119131 3
- 212807119132 4

Question Number : 298 Question Id : 21280729783 Question Type : MCQ Option Shuffling : No Is Question Mandatory : No Calculator : None Response Time : N.A Think Time : N.A Minimum Instruction Time : 0

Correct Marks : 5 Wrong Marks : 1

Question Key Details :

Key	Value
Comprehension	MCQ

W کے کتنے بیٹے ہیں؟

بیان I : X کے والد کے تین بیٹے ہیں۔

بیان II : X، Y کا بھائی اور W کا بیٹا ہے۔

سوال اور بیانات (I & II) کو پڑھیں اور فیصلہ کریں کہ کیا بیان میں دیا گیا ڈیٹا سوال کا جواب دینے کے لیے کافی ہے۔

- (1) بیان I تنہا کافی ہے جبکہ II تنہا کافی نہیں ہے
- (2) بیان II تنہا کافی ہے جبکہ I تنہا کافی نہیں ہے
- (3) بیان I اور بیان II ساتھ ساتھ کافی نہیں ہیں
- (4) بیان I اور بیان II ساتھ ساتھ جواب دینے کے لیے ضروری ہے

Options :

112807119129 1

212807119130 2

212807119131 3

212807119132 4

Question Number : 299 Question Id : 21280729784 Question Type : MCQ Option Shuffling : No Is Question Mandatory : No Calculator : None
Response Time : N.A Think Time : N.A Minimum Instruction Time : 0

Correct Marks : 5 Wrong Marks : 1

Question Key Details :

Key	Value
Comprehension	MCQ

What number is opposite to 3 in the dice shown below, the given positions are of the same dice.



- (1) 2
- (2) 4
- (3) 5
- (4) 6

Options :

212807119133 1

212807119134 2

212807119135 3

212807119136 4

Question Number : 299 Question Id : 21280729784 Question Type : MCQ Option Shuffling : No Is Question Mandatory : No Calculator : None
Response Time : N.A Think Time : N.A Minimum Instruction Time : 0

Correct Marks : 5 Wrong Marks : 1

Question Key Details :

Key	Value
Comprehension	MCQ

नीचे दर्शाए गए पासे में 3 के सामने कौन-सी संख्या है। प्रदर्शित स्थितियाँ इसी पासे की हैं।



- (1) 2
(2) 4
(3) 5
(4) 6

Options :

- 212807119133.1
212807119134.2
212807119135.3
212807119136.4

Question Number : 299 Question Id : 21280719784 Question Type : MCQ Option Shuffling : No Is Question Mandatory : No Calculator : None
Response Time : N.A Think Time : N.A Minimum Instruction Time : 0

Correct Marks : 5 Wrong Marks : 1

Question Key Details :

Key	Value
Comprehension	MCQ

तलत देखुंवा पाशाउटित '3' विपवीते कौनटो संख्या आछे, तलत दिय़ा छिबकेइटा एकेइ पाशाउटिब भिन्न अबहुन।



- (1) 2
(2) 4
(3) 5
(4) 6

Options :

- 212807119133.1
212807119134.2
212807119135.3
212807119136.4

Question Number : 299 Question Id : 21280719784 Question Type : MCQ Option Shuffling : No Is Question Mandatory : No Calculator : None
Response Time : N.A Think Time : N.A Minimum Instruction Time : 0

Correct Marks : 5 Wrong Marks : 1

Question Key Details :

Key	Value
Comprehension	MCQ

निम्ने प्रदर्शित छकार 3 एउ विपरीते कौन संख्या आछे। निम्ने प्रदर्शित छकारि एकइ छला।



- (1) 2
(2) 4
(3) 5
(4) 6

Options :

- 212807119133.1
212807119134.2

212507119133 3
212507119134 4

Question Number : 299 Question Id : 21250719784 Question Type : MCQ Option Shuffling : No Is Question Mandatory : No Calculator : None
Response Time : N.A Think Time : N.A Minimum Instruction Time : 0

Correct Marks : 5 Wrong Marks : 1

Question Key Details :

Key	Value
Comprehension	MCQ

બતાવેલ પાસા માં 3 ની વિરુદ્ધ કર્ સંખ્યા છે? આપેલ વિકલ્પ સમાન પાસાનો છે,



- (1) 2
- (2) 4
- (3) 5
- (4) 6

Options :

212507119133 1
212507119134 2
212507119135 3
212507119136 4

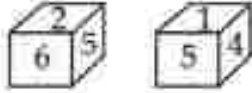
Question Number : 299 Question Id : 21250719784 Question Type : MCQ Option Shuffling : No Is Question Mandatory : No Calculator : None
Response Time : N.A Think Time : N.A Minimum Instruction Time : 0

Correct Marks : 5 Wrong Marks : 1

Question Key Details :

Key	Value
Comprehension	MCQ

તેલોડીરુવ ષગડેયુલ્લુ 3 ક્કુ ઢલુલ્લુવુગીરુવ ષરુલ્લુ ઢનુ ? ષલેડીરુવ ષુલ્લુલુ ઢલુલ્લુ ષગડેયુલ્લુ.



- (1) 2
- (2) 4
- (3) 5
- (4) 6

Options :

212507119133 1
212507119134 2
212507119135 3
212507119136 4

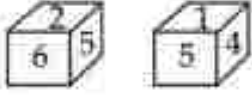
Question Number : 299 Question Id : 21250719784 Question Type : MCQ Option Shuffling : No Is Question Mandatory : No Calculator : None
Response Time : N.A Think Time : N.A Minimum Instruction Time : 0

Correct Marks : 5 Wrong Marks : 1

Question Key Details :

Key	Value
Comprehension	MCQ

खाली दिलेल्या फासांच्या आकृतीत 3 च्या विरुद्ध कोणती संख्या असेल? खाली दिलेल्या आकृतीतील फासांच्या स्थिती एकाच फासाच्या आहेत.



- (1) 2
- (2) 4
- (3) 5
- (4) 6

Options :

- 112807119133 1
- 112807119134 1
- 112807119135 3
- 112807119136 4

Question Number : 299 Question Id : 21280729784 Question Type : MCQ Option Shuffling : No Is Question Mandatory : No Calculator : None Response Time : N.A Think Time : N.A Minimum Instruction Time : 0

Correct Marks : 5 Wrong Marks : 1

Question Key Details :

Key	Value
Comprehension	MCQ

ഒരു ഡൈസിന്റെ രണ്ട് രീതിയിലുള്ള ചിത്രീകരണങ്ങൾ തന്നിരിക്കുന്നു. ഈ ഡൈസിന്റെ 3 വരുന്ന ഭാഗത്തിന് നേരെ ഏതിർഭാഗത്തുള്ള നമ്പർ എത്രയായിരിക്കും ?



- (1) 2
- (2) 4
- (3) 5
- (4) 6

Options :

- 112807119133 1
- 112807119134 1
- 112807119135 3
- 112807119136 4

Question Number : 299 Question Id : 21280729784 Question Type : MCQ Option Shuffling : No Is Question Mandatory : No Calculator : None Response Time : N.A Think Time : N.A Minimum Instruction Time : 0

Correct Marks : 5 Wrong Marks : 1

Question Key Details :

Key	Value
Comprehension	MCQ

ନିମ୍ନରେ ପ୍ରଦତ୍ତ ଦୁଇ ସମାନ କୁରୁଗୋଟିରେ m ସଂଖ୍ୟାର ବିପରୀତରେ କେଉଁ ସଂଖ୍ୟାଟି ରହିଛି ?



- (1) 2
- (2) 4
- (3) 5
- (4) 6

Options :

- 212807119133 1
- 212807119134 2
- 212807119135 3
- 212807119136 4

Question Number : 299 Question Id : 21280729784 Question Type : MCQ Option Shuffling : No Is Question Mandatory : No Calculator : None
Response Time : N.A Think Time : N.A Minimum Instruction Time : 0

Correct Marks : 5 Wrong Marks : 1

Question Key Details :

Key	Value
Comprehension	MCQ

ਦਿਖਾਏ ਗਏ ਚੌਰਸ ਟੁਕੜੇ ਵਿਚ 3 ਦੇ ਉਲਟ ਕਿਹੜੀ ਸੰਖਿਆ ਹੈ? ਦਿੱਤੀ ਗਈ ਸੰਖਿਤੀ ਇਕੋ ਚੌਰਸ ਟੁਕੜੇ ਦੀ ਹੈ ।



- (1) 2
- (2) 4
- (3) 5
- (4) 6

Options :

- 212807119133 1
- 212807119134 2
- 212807119135 3
- 212807119136 4

Question Number : 299 Question Id : 21280729784 Question Type : MCQ Option Shuffling : No Is Question Mandatory : No Calculator : None
Response Time : N.A Think Time : N.A Minimum Instruction Time : 0

Correct Marks : 5 Wrong Marks : 1

Question Key Details :

Key	Value
Comprehension	MCQ

ਕੋਠੇਰੇ ਛਾਪੜੇ ਵਿੱਚ ਦਿੱਤੇ ਪੜਾਅ ਵਿੱਚ 3 ਦੇ ਉਲਟ ਕਿਹੜੀ ਸੰਖਿਆ ਹੈ? ਦਿੱਤੀ ਗਈ ਸੰਖਿਤੀ ਇਕੋ ਚੌਰਸ ਟੁਕੜੇ ਦੀ ਹੈ ।



- (1) 2
- (2) 4
- (3) 5
- (4) 6

Options :

- 212807119133 1
- 212807119134 2
- 212807119135 3
- 212807119136 4

Question Number : 299 Question Id : 21280729784 Question Type : MCQ Option Shuffling : No Is Question Mandatory : No Calculator : None
Response Time : N.A Think Time : N.A Minimum Instruction Time : 0

Correct Marks : 5 Wrong Marks : 1

Question Key Details :

Key	Value
-----	-------

دو مکعبی کعبوں کی صورتیں دی گئی ہیں۔



ان دو کعبوں کے 3 کے عددوں کی تعداد کیا ہے؟

- (1) 2
(2) 4
(3) 5
(4) 6

Options :

212807119133 1

212807119134 2

212807119135 3

212807119136 4

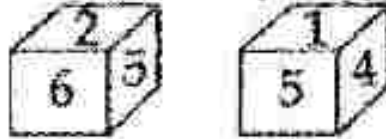
Question Number : 299 Question Id : 21280719784 Question Type : MCQ Option Shuffling : No Is Question Mandatory : No Calculator : None
Response Time : N.A Think Time : N.A Minimum Instruction Time : 0

Correct Marks : 5 Wrong Marks : 1

Question Key Details :

Key	Value
Comprehension	MCQ

دو مکعبی کعبوں کی صورتیں دی گئی ہیں۔



- 2 (1)
4 (2)
5 (3)
6 (4)

Options :

212807119133 1

212807119134 2

212807119135 3

212807119136 4

Question Number : 300 Question Id : 21280719785 Question Type : MCQ Option Shuffling : No Is Question Mandatory : No Calculator : None
Response Time : N.A Think Time : N.A Minimum Instruction Time : 0

Correct Marks : 5 Wrong Marks : 1

Question Key Details :

Key	Value
Comprehension	MCQ

Given below are two statements : one is labelled as **Assertion (A)** and the other is labelled as **Reason (R)**.

Assertion (A) : Mahatma Gandhi is considered as 'Father of Nation' in India.

Reason (R) : Mahatma Gandhi was the First Governor General of Independent India.

In the light of the above statements, choose the **most appropriate** answer from the options given below :

- (1) Both (A) and (R) are correct and (R) is the correct explanation of (A)
- (2) Both (A) and (R) are correct but (R) is **not** the correct explanation of (A)
- (3) (A) is correct but (R) is not correct
- (4) (A) is not correct but (R) is correct

Options :

212807119137 1

212807119138 2

212807119139 3

212807119140 4

Question Number : 300 Question Id : 21280719785 Question Type : MCQ Option Shuffling : No Is Question Mandatory : No Calculator : None
Response Time : N.A Think Time : N.A Minimum Instruction Time : 0

Correct Marks : 5 Wrong Marks : 1

Question Key Details :

Key	Value
Comprehension	MCQ

नीचे दो कथन दिए गए हैं: एक **अभिकथन (A)** के रूप में लिखित है तो दूसरा उसके **कारण (R)** के रूप में है।

अभिकथन (A) : भारत में महात्मा गाँधी को 'राष्ट्रपिता' माना जाता है।

कारण (R) : महात्मा गाँधी स्वतंत्र भारत के प्रथम गवर्नर जनरल थे।

उपरोक्त कथन के आलोक में, नीचे दिए गए विकल्पों में से **सही** उत्तर चयन कीजिए:

- (1) दोनों (A) और (R) सत्य हैं और (R), (A) की सही व्याख्या है
- (2) दोनों (A) और (R) सत्य हैं लेकिन (R), (A) की सही व्याख्या नहीं है
- (3) (A) सत्य है, लेकिन (R) असत्य है
- (4) (A) असत्य है, लेकिन (R) सत्य है

Options :

212807119127 1

212807119138 2

212807119139 3

212807119140 4

Question Number : 300 Question Id : 21280719785 Question Type : MCQ Option Shuffling : No Is Question Mandatory : No Calculator : None
Response Time : N.A Think Time : N.A Minimum Instruction Time : 0

Correct Marks : 5 Wrong Marks : 1

Question Key Details :

Key	Value
Comprehension	MCQ

তলত দুটা উক্তি দিয়া আছে : এটা হৈছে দাবী (A) আৰু আনটো হৈছে যুক্তি (R) :

দাবী (A) : মহাত্মা গান্ধীক ভাৰতত 'দেশৰ পিতা' হিচাপে গণ্য কৰা হয়।

যুক্তি (R) : মহাত্মা গান্ধী স্বাধীন ভাৰতৰ প্ৰথমজন ৰাষ্ট্ৰপ্ৰধান আছিল।

ওপৰোক্ত উক্তি দুটাৰ ভিত্তিত তলত দিয়া বিকল্পবোৰৰ পৰা আটাইতকৈ যথাৰ্থ উত্তৰটো বাছি উলিওৱা :

- (1) (A) আৰু (R) শুদ্ধ আৰু (R) হৈছে (A) ৰ শুদ্ধ ব্যাখ্যা।
- (2) (A) আৰু (R) শুদ্ধ আৰু (R) হৈছে (A) ৰ শুদ্ধ ব্যাখ্যা নহয়।
- (3) (A) শুদ্ধ কিন্তু (R) অশুদ্ধ।
- (4) (A) অশুদ্ধ কিন্তু (R) শুদ্ধ।

Options :

212807119137 1

212807119138 2

212807119139 3

212807119140 4

Question Number : 300 Question Id : 21280719785 Question Type : MCQ Option Shuffling : No Is Question Mandatory : No Calculator : None
Response Time : N.A Think Time : N.A Minimum Instruction Time : 0

Correct Marks : 5 Wrong Marks : 1

Question Key Details :

Key	Value
Comprehension	MCQ

নিম্নে দুটি বিবৃতি দেওয়া হল : একটিকে লেবেল কৰা হয়েছে দাবী/ফলাফল (A) এবং অপরটিকে লেবেল কৰা হয়েছে কাৰণ (R) হিসেবে :

দাবী/ফলাফল (A) : ভাৰতে মহাত্মা গান্ধীকে 'জাতির জনক' হিসেবে বিবেচনা কৰা হয়।

কাৰণ (R) : মহাত্মা গান্ধী ছিল স্বাধীন ভাৰতের প্ৰথম ৰাষ্ট্ৰপাল।

উপৰোক্ত বিবৃতিৰ আলোকে, নিম্নৰ বিকল্পগুলি থেকে সবচেয়ে উপযুক্ত উত্তৰটি নিৰ্বাচন কৰো :

- (1) উভয় (A) এবং (R) সঠিক এবং (R) হল (A) এর সঠিক ব্যাখ্যা।
- (2) উভয় (A) এবং (R) সঠিক এবং (R) সঠিক ব্যাখ্যা নয় (A) এর।
- (3) (A) সঠিক কিন্তু (R) সঠিক নয়।
- (4) (A) সঠিক নয় কিন্তু (R) সঠিক।

Options :

212807119137 1

212807119138 2

212807119139 3

212807119140 4

Question Number : 300 Question Id : 21280719785 Question Type : MCQ Option Shuffling : No Is Question Mandatory : No Calculator : None
Response Time : N.A Think Time : N.A Minimum Instruction Time : 0

Correct Marks : 5 Wrong Marks : 1

Question Key Details :

Key	Value
Comprehension	MCQ

पुढे दोन विधाने दिलेली आहेत : एकाच विधान **प्रतिपादन (A)** व दुसऱ्याला **कारण (R)** असे संबोधले आहे.

प्रतिपादन (A) : महात्मा गांधींना भारतात राष्ट्रपिता मानले जाते.

कारण (R) : महात्मा गांधी हे स्वतंत्र भारताचे पहिले गव्हर्नर जनरल होते.

खरील विधानांच्या आधारे पुढीलपैकी **सर्वाधिक योग्य** पर्याय निवडा.

- (1) (A) आणि (R) दोन्ही खरोबर असून (R) हे (A) चे योग्य स्पष्टीकरण आहे.
- (2) (A) आणि (R) दोन्ही खरोबर आहेत, परंतु (R) हे (A) चे योग्य स्पष्टीकरण नाही.
- (3) (A) योग्य आहे परंतु (R) चूक आहे
- (4) (A) चूक आहे परंतु (R) खरोबर आहे

Options :

- 212807119137 1
- 212807119138 2
- 212807119139 3
- 212807119140 4

Question Number : 300 Question Id : 21280719785 Question Type : MCQ Option Shuffling : No Is Question Mandatory : No Calculator : None
Response Time : N.A Think Time : N.A Minimum Instruction Time : 0

Correct Marks : 5 Wrong Marks : 1

Question Key Details :

Key	Value
Comprehension	MCQ

രണ്ട് പ്രസ്താവനകൾ തന്നിരിക്കുന്നു. പ്രസ്താവന ഒന്ന് **അസരീഷൻ (A)** എന്നും പ്രസ്താവന രണ്ട് **റീസൺ (R)** എന്നും അവപ്പെടുത്തിയിരിക്കുന്നു.

അസരീഷൻ (A) : മഹാത്മാ ഗാന്ധി ഇന്ത്യയുടെ രാഷ്ട്രപിതാവായി കണക്കാക്കപ്പെടുന്നു.

റീസൺ (R) : മഹാത്മാ ഗാന്ധി സ്വതന്ത്ര ഇന്ത്യയുടെ ആദ്യത്തെ ഗവർണർ ജനറൽ ആയിരുന്നു. മുകളിൽ തന്നിട്ടുള്ള പ്രസ്താവനകളുടെ വെളിച്ചത്തിൽ, താഴെ തന്നിട്ടുള്ളവയിൽ നിന്നും **ഏറ്റവും അനുയോജ്യമായ** ഉത്തരം തിരഞ്ഞെടുക്കുക.

- (1) (A) യും (R) ഉം ശരിയാണ്. (R), (A) യ്ക്കുള്ള കൃത്യമായ വിശദീകരണമാണ്.
- (2) (A) യും (R) ഉം ശരിയാണ്. പക്ഷെ (R), (A) യ്ക്കുള്ള കൃത്യമായ വിശദീകരണമല്ല.
- (3) (A) ശരിയാണ് പക്ഷെ (R) ശരിയല്ല.
- (4) (A) ശരിയല്ല പക്ഷെ (R) ശരിയാണ്.

Options :

- 212807119137 1
- 212807119138 2
- 212807119139 3
- 212807119140 4

Question Number : 300 Question Id : 21280719785 Question Type : MCQ Option Shuffling : No Is Question Mandatory : No Calculator : None
Response Time : N.A Think Time : N.A Minimum Instruction Time : 0

Correct Marks : 5 Wrong Marks : 1

Question Key Details :

Key	Value
Comprehension	MCQ

ਚੱਕਰ ਦੁਆਰੇ ਕਈ ਵੇਰ ਘੁੰਮਦੀ ਹੈ। ਚੱਕਰੀ ਵ ਕਈ (A) ਵਰਾ ਅਧਾਰੇ ਕਾਰ (R) ਕੁੱਝ ਵੇਰ ਘੁੰਮਦੀ ਹੈ।

ਕਈ (A) : ਸਮਾਜਿਕਾਣੀ ਕਾਰ ਚੱਕਰੀ ਚੱਕਰੀ ਕੁੱਝ ਵੇਰ ਘੁੰਮਦੀ ਹੈ।

ਕਾਰ (R) : ਸਮਾਜਿਕਾਣੀ ਕਾਰ ਚੱਕਰੀ ਕੁੱਝ ਵੇਰ ਘੁੰਮਦੀ ਹੈ।

ਕੁੱਝ ਵੇਰ ਘੁੰਮਦੀ ਚੱਕਰੀ ਕੁੱਝ ਵੇਰ ਘੁੰਮਦੀ ਹੈ।

(1) ਕਈ (A) ਵਰਾ (R) ਕੁੱਝ ਵੇਰ ਘੁੰਮਦੀ ਹੈ (A) ਕੁੱਝ ਵੇਰ ਘੁੰਮਦੀ ਹੈ।

(2) ਕਈ (A) ਵਰਾ (R) ਕੁੱਝ ਵੇਰ ਘੁੰਮਦੀ ਹੈ (A) ਕੁੱਝ ਵੇਰ ਘੁੰਮਦੀ ਹੈ।

(3) (A) ਕੁੱਝ ਵੇਰ ਘੁੰਮਦੀ ਹੈ (R) ਕੁੱਝ ਵੇਰ ਘੁੰਮਦੀ ਹੈ।

(4) (A) ਕੁੱਝ ਵੇਰ ਘੁੰਮਦੀ ਹੈ (R) ਕੁੱਝ ਵੇਰ ਘੁੰਮਦੀ ਹੈ।

Options :

212807119137 1

212807119138 2

212807119139 3

212807119140 4

Question Number : 300 Question Id : 21280719785 Question Type : MCQ Option Shuffling : No Is Question Mandatory : No Calculator : None
Response Time : N.A Think Time : N.A Minimum Instruction Time : 0

Correct Marks : 5 Wrong Marks : 1

Question Key Details :

Key	Value
Comprehension	MCQ

ਹੇਠਾਂ ਦੇ ਬਿਆਨ ਦਿੱਤੇ ਹਨ ਇਕ ਲੇਖਲ ਹੈ ਦਾਅਵਾ (A) ਅਤੇ ਦੂਜਾ ਲੇਖਲ ਹੈ ਕਾਰਣ (R)।

ਦਾਅਵਾ (A) : ਮਹਾਤਮਾ ਗਾਂਧੀ ਨੂੰ ਭਾਰਤ ਵਿਚ ਰਾਸ਼ਟਰ ਪਿਤਾ ਮੰਨਿਆ ਜਾਂਦਾ ਹੈ।

ਕਾਰਣ (R) : ਮਹਾਤਮਾ ਗਾਂਧੀ ਆਜ਼ਾਦ ਭਾਰਤ ਦੇ ਪਹਿਲੇ ਗਵਰਨਰ ਜਨਰਲ ਸਨ।

ਉੱਪਰ ਦਿੱਤੇ ਬਿਆਨਾਂ ਦੀ ਰੋਸ਼ਨੀ ਵਿਚ ਹੇਠਾਂ ਦਿੱਤੇ ਵਿਕਲਪਾਂ ਵਿਚੋਂ ਸਭ ਤੋਂ ਢੁੱਕਵਾਂ ਉੱਤਰ ਲੱਭੋ :

(1) ਦੋਵੇਂ (A) ਅਤੇ (R) ਸਹੀ ਹਨ ਅਤੇ (R) ਠੀਕ ਵਿਆਖਿਆ ਹੈ (A) ਦੀ।

(2) ਦੋਵੇਂ (A) ਅਤੇ (R) ਸਹੀ ਹਨ ਪਰ (R) ਠੀਕ ਵਿਆਖਿਆ ਨਹੀਂ ਹੈ (A) ਦੀ।

(3) (A) ਸਹੀ ਹੈ ਪਰ (R) ਸਹੀ ਨਹੀਂ ਹੈ।

(4) (A) ਸਹੀ ਨਹੀਂ ਹੈ ਪਰ (R) ਸਹੀ ਹੈ।

Options :

212807119137 1

212807119138 2

212807119139 3

212807119140 4

Question Number : 300 Question Id : 21280719785 Question Type : MCQ Option Shuffling : No Is Question Mandatory : No Calculator : None
Response Time : N.A Think Time : N.A Minimum Instruction Time : 0

Correct Marks : 5 Wrong Marks : 1

Question Key Details :

Key	Value
Comprehension	MCQ

Correct Marks : 5 Wrong Marks : 1

Question Key Details :

Key	Value
Comprehension	MCQ

نیچے دو بیانات دئے گئے ہیں ایک دعویٰ (A) اور دوسرا دلیل (R) ہے۔

دعویٰ (A) مہاتما گاندھی کو ہانے قوم کہا جاتا ہے

دلیل (R) مہاتما گاندھی آزاد ہندوستان کے پہلے گورنر جنرل تھے

اوپر دیے گئے بیانات کی روشنی میں مندرجہ ذیل میں سے سب سے درست جواب کی نشاندہی کریں۔

(1) دعویٰ (A) اور دلیل (R) دونوں درست ہے اور دلیل دعویٰ کی درست توجیح ہے

(2) دعویٰ (A) اور دلیل (R) دونوں درست ہے لیکن دلیل دعویٰ کی درست توجیح نہیں ہے

(3) دعویٰ (A) درست ہے لیکن دلیل (R) درست نہیں ہے

(4) دعویٰ (A) درست نہیں ہے لیکن دلیل (R) درست ہے

Options :

- 212807119127 1
- 212807119138 2
- 212807119139 3
- 212807119140 4

Question Number : 301 Question Id : 21280729786 Question Type : MCQ Option Shuffling : No Is Question Mandatory : No Calculator : None
Response Time : N.A Think Time : N.A Minimum Instruction Time : 0

Correct Marks : 5 Wrong Marks : 1

Question Key Details :

Key	Value
Comprehension	MCQ

A man walks 10 m in front and then 10 m to the right. Then every time returning to his left, he walks 5, 15 and 15 m, respectively. How far is he now from his starting point ?

(1) 5 m

(2) 10 m

(3) 15 m

(4) 16 m

Options :

- 212807119141 1
- 212807119142 2
- 212807119143 3
- 212807119144 4

Question Number : 301 Question Id : 21280729786 Question Type : MCQ Option Shuffling : No Is Question Mandatory : No Calculator : None
Response Time : N.A Think Time : N.A Minimum Instruction Time : 0

Correct Marks : 5 Wrong Marks : 1

Question Key Details :

Key	Value
Comprehension	MCQ

एक पुरुष अपने सामने की ओर 10 मीटर पैदल चलता है और दाईं ओर 10 मीटर चलता है। लौटते समय हर बार अपनी बाईं ओर क्रमशः 5, 15 और 15 मीटर चलता है। तो अब वह अपने आरम्भिक बिंदु से कितनी दूर है ?

- (1) 5 मीटर
- (2) 10 मीटर
- (3) 15 मीटर
- (4) 16 मीटर

Options :

212807119141 1
212807119142 2
212807119143 3
212807119144 4

Question Number : 301 Question Id : 21280719756 Question Type : MCQ Option Shuffling : No Is Question Mandatory : No Calculator : None
Response Time : N.A Think Time : N.A Minimum Instruction Time : 0

Correct Marks : 5 Wrong Marks : 1

Question Key Details :

Key	Value
Comprehension	MCQ

এজন মানুহে সম্মুখলৈ 10 মিটাৰ খোজকাঢ়ি আকৌ সোঁফালে 10 মিটাৰ খোজ কাঢ়িলে। প্ৰত্যেকবাৰেই তেওঁ বাঁওপিনে ঘূৰি আহোঁতে তেওঁ ক্ৰমান্বয়ে 5, 15 আৰু 15 মিটাৰ খোজকাঢ়িলে। তেওঁৰ আৰম্ভণি স্থানৰ পৰা কিমান দূৰত আছে ?

- (1) 5 মিটাৰ
- (2) 10 মিটাৰ
- (3) 15 মিটাৰ
- (4) 16 মিটাৰ

Options :

212807119141 1
212807119142 2
212807119143 3
212807119144 4

Question Number : 301 Question Id : 21280719756 Question Type : MCQ Option Shuffling : No Is Question Mandatory : No Calculator : None
Response Time : N.A Think Time : N.A Minimum Instruction Time : 0

Correct Marks : 5 Wrong Marks : 1

Question Key Details :

Key	Value
Comprehension	MCQ

এক ব্যক্তি 10 মিটাৰ সম্মুখে হাঁটলেন এবং তারপর ডানদিকে 10 মিটাৰ। তারপর প্রতিবার তার বামদিকে ফিরে, তিনি যথাক্রমে 5, 15 এবং 15 মিটাৰ হাঁটলেন। তিনি তার প্রাথমিক অবস্থা থেকে কত দূরে আছেন ?

- (1) 5 মিটাৰ
- (2) 10 মিটাৰ
- (3) 15 মিটাৰ
- (4) 16 মিটাৰ

Options :

212807119141 1
212807119142 2
212807119143 3
212807119144 4

Question Number : 301 Question Id : 21280719786 Question Type : MCQ Option Shuffling : No Is Question Mandatory : No Calculator : None
Response Time : N.A Think Time : N.A Minimum Instruction Time : 0

Correct Marks : 5 Wrong Marks : 1

Question Key Details :

Key	Value
Comprehension	MCQ

એક માણસ 10 મીટર આગળ અને 10 મીટર જમણી તરફ ચાલે છે. દર વખતે ત્યારે તેની ડાબી તરફ પાછા કરે છે ત્યારે તે અનુક્રમે 5, 13 અને 15 મીટર ચાલે છે તે હવે તેના પ્રારંભિક બિંદુ થી કેટલો દુર છે?

- (1) 5 મીટર
- (2) 10 મીટર
- (3) 15 મીટર
- (4) 16 મીટર

Options :

212807119141 1

212807119142 2

212807119143 3

212807119144 4

Question Number : 301 Question Id : 21280719786 Question Type : MCQ Option Shuffling : No Is Question Mandatory : No Calculator : None
Response Time : N.A Think Time : N.A Minimum Instruction Time : 0

Correct Marks : 5 Wrong Marks : 1

Question Key Details :

Key	Value
Comprehension	MCQ

ઢૂબ્ધ વ્યક્તિયુ 10 મિલિટર મુનદે મુત્તુ 10 મિલિટર બલકુ નદેયુક્તુને. પ્રકી ડાઉ અવન ંદકુ પેન્ટેયુગુજાગ, અવનુ અનુક્રમુજાગ 5, 15 મુત્તુ 15 મિલિટરુગુ નદેયુક્તુને. અવનુગ કનુ પ્રુરંબુક સુકદિનદ ંકુ કુરદરુદુકુ ?

- (1) 5 મિલિટરુગુ
- (2) 10 મિલિટરુગુ
- (3) 15 મિલિટરુગુ
- (4) 16 મિલિટરુગુ

Options :

212807119141 1

212807119142 2

212807119143 3

212807119144 4

Question Number : 301 Question Id : 21280719786 Question Type : MCQ Option Shuffling : No Is Question Mandatory : No Calculator : None
Response Time : N.A Think Time : N.A Minimum Instruction Time : 0

Correct Marks : 5 Wrong Marks : 1

Question Key Details :

Key	Value
Comprehension	MCQ

एक व्यक्ती समोरच्या बाजूला 10 मी. चालली आणि नंतर उजवीकडे 10 मी. चालली. त्यानंतर परतताना प्रत्येकवेळी त्याच्या डावीकडे अनुक्रमे 5, 15 आणि 15 मी. चालली. आता ती त्याच्या आरंभबिंदूपासून किती अंतरावर आहे ?

- (1) 5 मी.
- (2) 10 मी.
- (3) 15 मी.
- (4) 16 मी.

Options :

- 212807119141 1
212807119142 2
212807119143 3
212807119144 4

Question Number : 391 Question Id : 21280729756 Question Type : MCQ Option Shuffling : No Is Question Mandatory : No Calculator : None Response Time : N.A Think Time : N.A Minimum Instruction Time : 0

Correct Marks : 5 Wrong Marks : 1

Question Key Details :

Key	Value
Comprehension	MCQ

एखादा 10 मीटर दूरीसाठी नक्षत्रांचा अंतर 10 मीटर परतताना प्रत्येकवेळी त्याच्या डावीकडे अनुक्रमे 5, 15, 15 मीटरातून वळून नक्षत्रांचा अंतरातून इतर अंतरातून नक्षत्रांचा अंतरातून इतर अंतरातून ?

- (1) 5 मीटर
- (2) 10 मीटर
- (3) 15 मीटर
- (4) 16 मीटर

Options :

- 212807119141 1
212807119142 2
212807119143 3
212807119144 4

Question Number : 391 Question Id : 21280729756 Question Type : MCQ Option Shuffling : No Is Question Mandatory : No Calculator : None Response Time : N.A Think Time : N.A Minimum Instruction Time : 0

Correct Marks : 5 Wrong Marks : 1

Question Key Details :

Key	Value
Comprehension	MCQ

एखादा 10 मीटर दूरीसाठी नक्षत्रांचा अंतर 10 मीटर परतताना प्रत्येकवेळी त्याच्या डावीकडे अनुक्रमे 5, 15, 15 मीटरातून वळून नक्षत्रांचा अंतरातून इतर अंतरातून ?

- (1) 5 मीटर
- (2) 10 मीटर
- (3) 15 मीटर
- (4) 16 मीटर

Options :

- 212807119141 1
212807119142 2

212507119143 3
212507119144 4

Question Number : 301 Question Id : 21250719756 Question Type : MCQ Option Shuffling : No Is Question Mandatory : No Calculator : None
Response Time : N.A Think Time : N.A Minimum Instruction Time : 0
Correct Marks : 5 Wrong Marks : 1

Question Key Details :

Key	Value
Comprehension	MCQ

ਇਕ ਆਦਮੀ 10 ਮੀਟਰ ਅੱਗੇ ਤੇ 10 ਮੀਟਰ ਸੱਜੇ ਤੁਰਦਾ ਹੈ ਹਰ ਵਾਰ ਆਪਣੇ ਖੱਬੇ ਮੁੜਦਿਆਂ ਉਹ 5, 15 ਅਤੇ 15 ਮੀਟਰ ਕ੍ਰਮਵਾਰ ਤੁਰਦਾ ਹੈ। ਹੁਣ ਉਹ ਆਪਣੇ ਚੱਲਣ ਵਾਲੇ ਬਿੰਦੂ ਤੋਂ ਕਿੰਨੀ ਦੂਰ ਹੈ?

- (1) 5 ਮੀਟਰ
- (2) 10 ਮੀਟਰ
- (3) 15 ਮੀਟਰ
- (4) 16 ਮੀਟਰ

Options :

212507119141 1
212507119142 2
212507119143 3
212507119144 4

Question Number : 301 Question Id : 21250719756 Question Type : MCQ Option Shuffling : No Is Question Mandatory : No Calculator : None
Response Time : N.A Think Time : N.A Minimum Instruction Time : 0
Correct Marks : 5 Wrong Marks : 1

Question Key Details :

Key	Value
Comprehension	MCQ

ஒரு மனிதன் முன்னால் 10 மீட்டரும், பின்னர் வலதுபுறம் 10 மீட்டரும் நடக்கிறான். பின்னர் ஒவ்வொரு முறையும் இடது பக்கம் திரும்பும் போது, அவர் முறையே 5, 15 மற்றும் 15 மீட்டர் நடக்கிறார். அவர் இப்போது தனது தொடக்க புள்ளியிலிருந்து எவ்வளவு தொலைவில் இருக்கிறார்?

- (1) 5 மீட்டர்
- (2) 10 மீட்டர்
- (3) 15 மீட்டர்
- (4) 16 மீட்டர்

Options :

212507119141 1
212507119142 2
212507119143 3
212507119144 4

Question Number : 301 Question Id : 21250719756 Question Type : MCQ Option Shuffling : No Is Question Mandatory : No Calculator : None
Response Time : N.A Think Time : N.A Minimum Instruction Time : 0
Correct Marks : 5 Wrong Marks : 1

Question Key Details :

Key	Value
Comprehension	MCQ

ఒక వ్యక్తి 10 మీటర్లు ముందుకు మరియు 10 మీటర్లు కుడివైపు నడిచాడు. ప్రతిసారి ఎడమవైపు తిరిగినప్పుడు వరుసగా అతను 5, 15 మరియు 15 మీటర్లు నడిచాడు. తన ప్రారంభ స్థానం నుండి ఎంత దూరంలో ఉన్నాడు ?

- (1) 5 మీటర్లు
- (2) 10 మీటర్లు
- (3) 15 మీటర్లు
- (4) 16 మీటర్లు

Options :

212807119141: 3

212807119142: 3

212807119143: 3

212807119144: 4

Question Number : 301 Question Id : 21280729756 Question Type : MCQ Option Shuffling : No Is Question Mandatory : No Calculator : None
Response Time : N.A Think Time : N.A Minimum Instruction Time : 0

Correct Marks : 5 Wrong Marks : 1

Question Key Details :

Key	Value
Comprehension	MCQ

ایک شخص سامنے سے دس میٹر چلتا ہے پھر دائینی جانب دس میٹر چلتا ہے۔ اپنے بائیں جانب مڑتے ہوئے ہر بار بالترتیب پانچ میٹر پندرہ میٹر اور پھر پندرہ میٹر چلتا ہے۔ اب وہ اپنے سیدھے نقطہ سے کتنی دوری پر ہے۔

(1) 5 میٹر

(2) 10 میٹر

(3) 15 میٹر

(4) 16 میٹر

Options :

212807119141: 3

212807119142: 3

212807119143: 3

212807119144: 4

Question Number : 302 Question Id : 21280729757 Question Type : MCQ Option Shuffling : No Is Question Mandatory : No Calculator : None
Response Time : N.A Think Time : N.A Minimum Instruction Time : 0

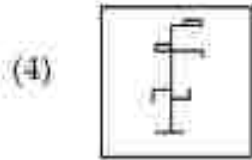
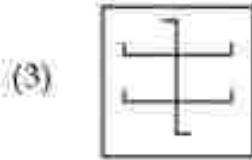
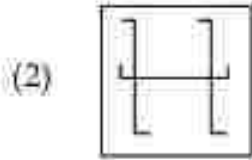
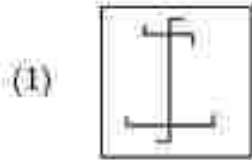
Correct Marks : 5 Wrong Marks : 1

Question Key Details :

Key	Value
Comprehension	MCQ



In which among the following figure the above figure is embedded ?



Options :

212907119145-1

212907119146-2

212907119147-3

212907119148-4

Question Number : 292 Question Id : 21290719787 Question Type : MCQ Option Shuffling : No Is Question Mandatory : No Calculator : None
Response Time : N.A Think Time : N.A Minimum Instruction Time : 0

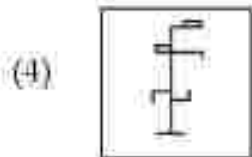
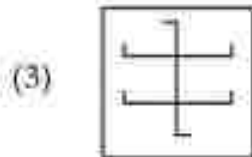
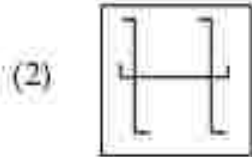
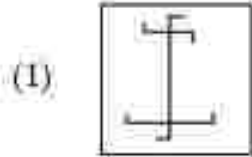
Correct Marks : 5 Wrong Marks : 1

Question Key Details :

Key	Value
Comprehension	MCQ



निम्नलिखित आकृतियों में से कौन-सी उपर्युक्त आकृति में सन्निहित है ?



Options :

112207119143 1

112207119146 2

112207119147 3

112207119149 4

Question Number : 302 Question Id : 11220729787 Question Type : MCQ Option Skuffling : No Is Question Mandatory : No Calculator : None
Response Time : N.A Think Time : N.A Minimum Instruction Time : 0

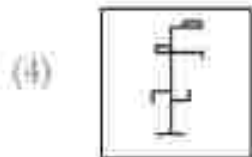
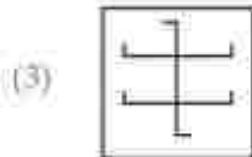
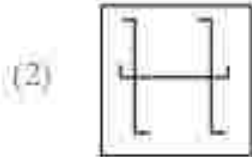
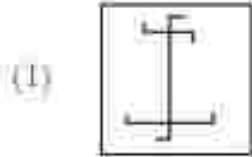
Correct Marks : 5 Wrong Marks : 1

Question Key Details :

Key	Value
Comprehension	MCQ



উক্ত চিত্রটি তলব কোনটো চিত্রত সোমাই আছে ?



Options :

112207119145 1

112207119146 2

112207119147 3

112207119148 4

Question Number : 302 Question Id : 21260729787 Question Type : MCQ Option Skuffling : No Is Question Mandatory : No Calculator : None
Response Time : N.A Think Time : N.A Minimum Instruction Time : 0

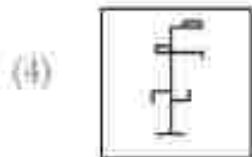
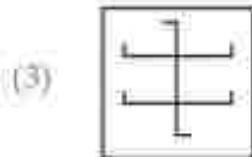
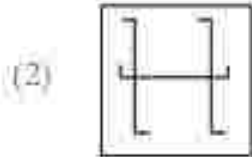
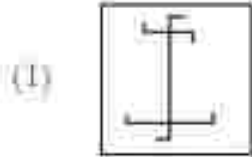
Correct Marks : 5 Wrong Marks : 1

Question Key Details :

Key	Value
Comprehension	MCQ



উপরোক্ত চিত্রটি নিম্নের কোন চিত্রে স্থাপন করা যাবে ?



Options :

112207119143 1

112207119146 2

112207119147 3

112207119149 4

Question Number : 302 Question Id : 11220729787 Question Type : MCQ Option Skuffling : No Is Question Mandatory : No Calculator : None
Response Time : N.A Think Time : N.A Minimum Instruction Time : 0

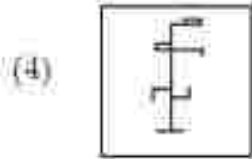
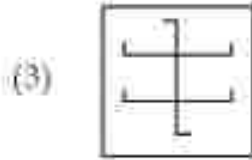
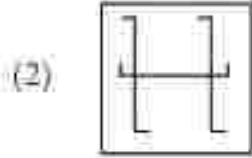
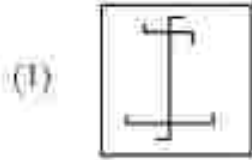
Correct Marks : 5 Wrong Marks : 1

Question Key Details :

Key	Value
Comprehension	MCQ



નીચે આપેલ આકૃતિ પૈકી કઈ ઉપરની આકૃતિ સખધા (embedded) કરે છે?



Options :

212907119145-1

212907119146-2

212907119147-3

212907119148-4

Question Number : 302 Question Id : 21290719787 Question Type : MCQ Option Shuffling : No Is Question Mandatory : No Calculator : None
Response Time : N.A Think Time : N.A Minimum Instruction Time : 0

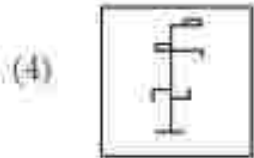
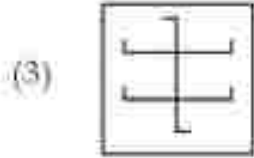
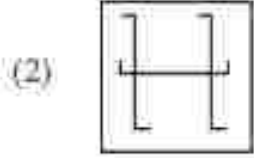
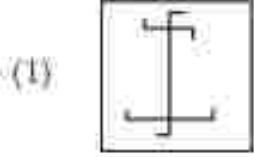
Correct Marks : 5 Wrong Marks : 1

Question Key Details :

Key	Value
Comprehension	MCQ



ಕೆಳಗಿನವುಗಳಲ್ಲಿ ಯಾವ ಚಿತ್ರವು ಮೇಲಿನ ಚಿತ್ರವನ್ನು ಎದುರಿಸುತ್ತದೆ ?



Options :

112107119143 1

112107119146 2

112107119147 3

112107119149 4

Question Number : 302 Question Id : 112107129787 Question Type : MCQ Option Skuffling : No Is Question Mandatory : No Calculator : None
Response Time : N.A Think Time : N.A Minimum Instruction Time : 0

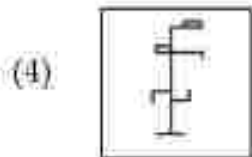
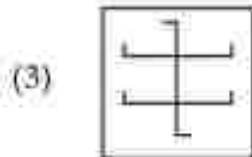
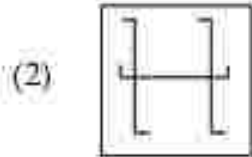
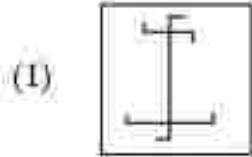
Correct Marks : 5 Wrong Marks : 1

Question Key Details :

Key	Value
Comprehension	MCQ



चरील आकृती पुढीलपैकी कोणत्या आकृतीत योग्य पद्धतीने बसवता येईल ?



Options :

112807119145 1

112807119146 2

112807119147 3

112807119148 4

Question Number : 302 Question Id : 21280729787 Question Type : MCQ Option Skuffling : No Is Question Mandatory : No Calculator : None
Response Time : N.A Think Time : N.A Minimum Instruction Time : 0

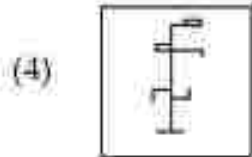
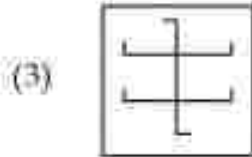
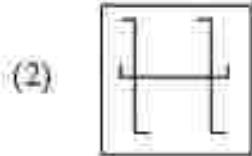
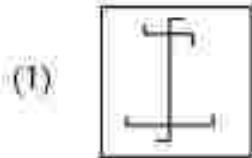
Correct Marks : 5 Wrong Marks : 1

Question Key Details :

Key	Value
Comprehension	MCQ



മുകളിൽ തന്നിട്ടുള്ള ചിത്രം ഉള്ളടങ്ങിയിട്ടുള്ള ചിത്രീകരണം താഴെ തന്നിട്ടുള്ളവയിൽ നിന്ന് കണ്ടെത്തുക.



Options :

212807119145 1

212807119146 2

212807119147 3

212807119148 4

Question Number : 302 Question Id : 21280729787 Question Type : MCQ Option Shuffling : No Is Question Mandatory : No Calculator : None

Response Time : N.A Think Time : N.A Minimum Instruction Time : 0

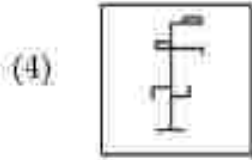
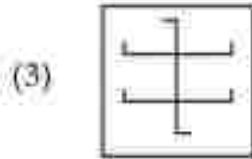
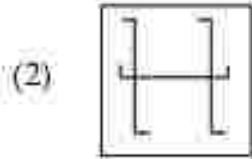
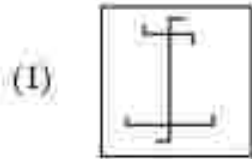
Correct Marks : 5 Wrong Marks : 1

Question Key Details :

Key	Value
Comprehension	MCQ



ନିମ୍ନୋକ୍ତ ନିରୂପାଣକ ମଧ୍ୟରୁ ଉପରୋକ୍ତ ଚେନିଁ ଛବିଟିକୁ ଏକତେରୁ ଭବିତା ?



Options :

112207119145 1

112207119146 2

112207119147 3

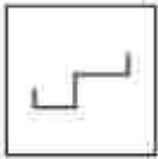
112207119148 4

Question Number : 302 Question Id : 21260729787 Question Type : MCQ Option Skuffling : No Is Question Mandatory : No Calculator : None
Response Time : N.A Think Time : N.A Minimum Instruction Time : 0

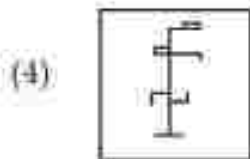
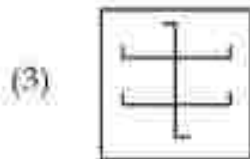
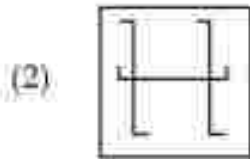
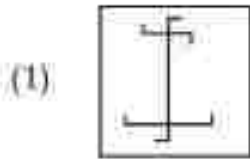
Correct Marks : 5 Wrong Marks : 1

Question Key Details :

Key	Value
Comprehension	MCQ



ਹੇਠਾਂ ਦਿੱਤੇ ਚਿਤਰਾਂ ਵਿਚੋਂ ਉਪਰੋਕਤ ਦਾ ਮੁਕਾਬਲਾ ਕਿਸ ਵਿਚ ਕੀਤਾ ਹੈ?



Options :

212807119145 1

212807119146 2

212807119147 3

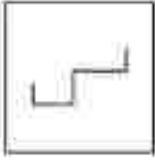
212807119148 4

Question Number : 302 Question Id : 21280719767 Question Type : MCQ Option Shuffling : No Is Question Mandatory : No Calculator : None
Response Time : N.A Think Time : N.A Minimum Instruction Time : 0

Correct Marks : 5 Wrong Marks : 1


Question Key Details :

Key	Value
Comprehension	MCQ

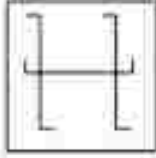


பின்வரும் படத்தில் மேலே உள்ள படம் எதில் பொதிந்துள்ளது ?

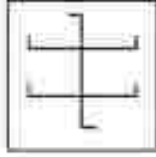
(1)



(2)



(3)



(4)



Options :

212807119145 3

212807119146 3

212807119147 3

212807119148 4

Question Number : 302 Question Id : 21280729787 Question Type : MCQ Option Shuffling : No Is Question Mandatory : No Calculator : None

Response Time : N.A Think Time : N.A Minimum Instruction Time : 0

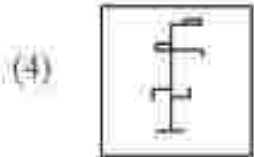
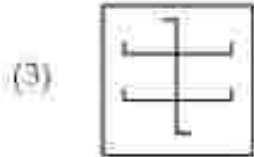
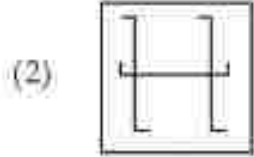
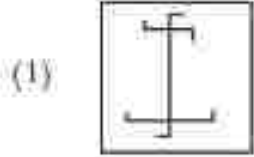
Correct Marks : 5 Wrong Marks : 1

Question Key Details :

Key	Value
Comprehension	MCQ



పై వటం కింది ఏ వటంతో నిరోధించబడును ?



Options :

- 212807119145:1
- 212807119146:1
- 212807119147:3
- 212807119148:4

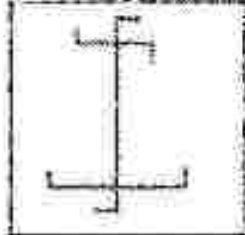
Question Number : 302 Question Id : 21280729787 Question Type : MCQ Option Shuffling : No Is Question Mandatory : No Calculator : None
Response Time : N.A Think Time : N.A Minimum Instruction Time : 0

Correct Marks : 5 Wrong Marks : 1

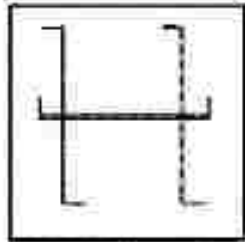
Question Key Details :

Key	Value
Comprehension	MCQ

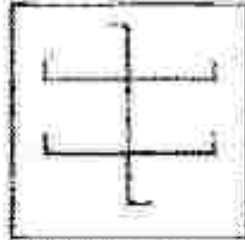
اوپر دئے گئے شکل میں مندرجہ ذیل میں سے کون سی شکل درست بیٹھنے کی۔



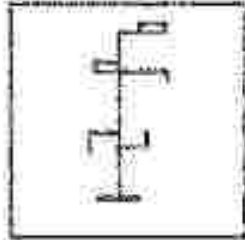
(1)



(2)



(3)



(4)

Options :

112807119145 1

112807119146 2

112807119147 3

112807119148 4


Question Number : 303 Question Id : 21280729788 Question Type : MCQ Option Shuffling : No Is Question Mandatory : No Calculator : None:
Response Time : N.A Think Time : N.A Minimum Instruction Time : 0

Correct Marks : 5 Wrong Marks : 1

Question Key Details :

Key	Value
Comprehension	MCQ

Which figure out of given options can replace '?'.



- (1)
- (2)
- (3)
- (4)

Options :

112807119149 1

112807119150 2

112807119151 3

112807119152 4


Question Number : 303 Question Id : 21280729788 Question Type : MCQ Option Skuffing : No Is Question Mandatory : No Calculator : None
Response Time : N.A Think Time : N.A Minimum Instruction Time : 0

Correct Marks : 5 Wrong Marks : 1

Question Key Details :

Key	Value
Comprehension	MCQ

नीचे दिए गए विकल्पों में से कौन '?' को प्रतिस्थापित कर सकता है ?



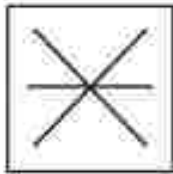
(1)




(2)



(3)



(4)



Options :

212807119149-1

212807119150-2

212807119151-3

212807119152-4


Question Number : 303 Question Id : 21280729735 Question Type : MCQ Option Shuffling : No Is Question Mandatory : No Calculator : None
Response Time : N.A Think Time : N.A Minimum Instruction Time : 0

Correct Marks : 5 Wrong Marks : 1

Question Key Details :

Key	Value
Comprehension	MCQ

তলৰ কোনটো চিত্ৰ (১) প্ৰস্তুতিৰূপে স্থানত বহিব ?



- (1)
- (2)
- (3)
- (4)

Options :

212807119149 1

212807119150 2

212807119151 3

212807119152 4


Question Number : 303 Question Id : 21280719788 Question Type : MCQ Option Shuffling : No Is Question Mandatory : No Calculator : None
Response Time : N.A Think Time : N.A Minimum Instruction Time : 0

Correct Marks : 5 Wrong Marks : 1

Question Key Details :

Key	Value
Comprehension	MCQ

প্রশ্ন (১) চিত্রিত স্থানে কোন চিত্রটি বসবে ?



- (1)
- (2)
- (3)
- (4)

Options :

- 212807119149 1
 212807119150 2
 212807119151 3
 212807119152 4


Question Number : 303 Question Id : 21280719788 Question Type : MCQ Option Shuffling : No Is Question Mandatory : No Calculator : None
 Response Time : N.A Think Time : N.A Minimum Instruction Time : 0


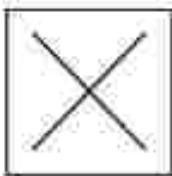
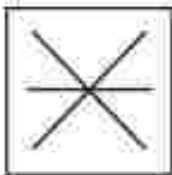

Correct Marks : 5 Wrong Marks : 1

Question Key Details :

Key	Value
Comprehension	MCQ

આપેલા વિકલ્પોમાંથી ઠીક આકૃતિ તેને બદલી શકે છે?



- (1) 
- (2) 
- (3) 
- (4) 

Options :

212807119149-1

212807119150-2

212807119151-3

212807119152-4

Question Number : 303 Question Id : 21280719788 Question Type : MCQ Option Shuffling : No Is Question Mandatory : No Calculator : None


Response Time : N.A Think Time : N.A Minimum Instruction Time : 0

Correct Marks : 5 Wrong Marks : 1

Question Key Detail :

Key	Value
comprehension	MCQ

ಕೆಳಗಿನ ಅಯ್ಯಗಳಿಂದ ಪ್ರತ್ಯಾಭಾಸಕ ಚಿಹ್ನೆಯು ಜಾಗವನ್ನು ಪೂರ್ತಿಗೊಳಿಸಿ.



- (1)
- (2)
- (3)
- (4)

Options :

212507119149 : 1

212507119150 : 2

212507119151 : 3

212507119152 : 4

Question Number : 303 Question Id : 212507119735 Question Type : MCQ Option Shuffling : No Is Question Mandatory : No Calculator : None


Response Time : N.A Think Time : N.A Minimum Instruction Time : 0

Correct Marks : 5 Wrong Marks : 1

Question Key Details :

Key	Value
Comprehension	MCQ

प्रश्न चिन्हाच्या जागी कोणती आकृती असेल?



- (1)
- (2)
- (3)
- (4)

Options :

- 212807119149 1
 212807119150 2
 212807119151 3
 212807119152 4

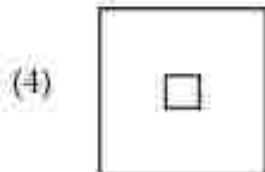
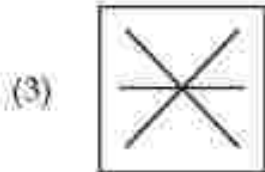
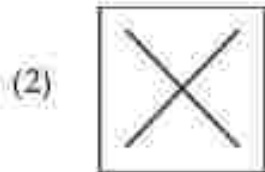
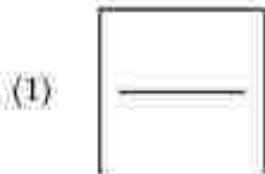

Question Number : 303 Question Id : 21280719788 Question Type : MCQ Option Shuffling : No Is Question Mandatory : No Calculator : None
 Response Time : N.A Think Time : N.A Minimum Instruction Time : 0

Correct Marks : 5 Wrong Marks : 1

Question Key Details :

Key	Value
Comprehension	MCQ

ചോദ്യ ചിഹ്നം നൽകിയിരിക്കുന്ന കോളങ്ങളിൽ ചേർക്കേണ്ട ചിത്രം തന്നിട്ടുള്ളവയിൽ നിന്ന് തിരഞ്ഞെടുക്കുക.




Options :
 212807119149 3
 212807119150 3
 212807119151 3
 212807119152 4

Question Number : 303 Question Id : 21280729755 Question Type : MCQ Option Shuffling : No Is Question Mandatory : No Calculator : None
 Response Time : N.A Think Time : N.A Minimum Instruction Time : 0
 Correct Marks : 5 Wrong Marks : 1

Question Key Details :

Key	Value
Comprehension	MCQ

ପ୍ରଦତ୍ତ ବିଚ୍ଛେଦନକ ମଧ୍ୟରୁ ଯେଉଁ ଛବିଟି ଉପରୋକ୍ତ କୋଠମାନେ ଭାଙ୍ଗିବ ' ? ।



- (1)
- (2)
- (3)
- (4)

Options :

212807119149-1

212807119150-2

212807119151-3

212807119152-4

Question Number : 303 Question Id : 21280719788 Question Type : MCQ Option Shuffling : No Is Question Mandatory : No Calculator : None


Response Time : N.A Think Time : N.A Minimum Instruction Time : 0



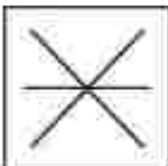

Correct Marks : 5 Wrong Marks : 1

Question Key Detail :

Key	Value
Comprehension	MCQ

ਹੇਠਾਂ ਦਿੱਤੇ ਚਿੱਤਰਾਂ ਵਿੱਚੋਂ ਇਸ ਚਿੱਤਰ ਦਾ ਮੁਕਾਬਲਾ ਕਿਸ ਠਾਲ ਕੀਤਾ ਹੈ?



- (1) 
- (2) 
- (3) 
- (4) 

Options :

112207119149 1

212207119150 2

312207119151 3

412207119152 4

Question Number : 365 Question Id : 21220719786 Question Type : MCQ Option Shuffling : No Is Question Mandatory : No Calculator : None
Response Time : N.A Think Time : N.A Minimum Instruction Time : 0


Correct Marks : 5 Wrong Marks : 1

Question Key Details :


Key	Value
Comprehension	3000

கொடுக்கப்பட்ட விரும்பங்களில் எந்த புள்ளிவிவரம் இருக்கும்.

?க்கு மாற்றாக



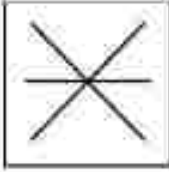
(1)



(2)



(3)



(4)



Options :

- 212507119149-1
 212507119150-2
 212507119151-3
 212507119152-4


Question Number : 303 Question Id : 21250719735 Question Type : MCQ Option Shuffling : No Is Question Mandatory : No Calculator : None
 Response Time : N.A Think Time : N.A Minimum Instruction Time : 0



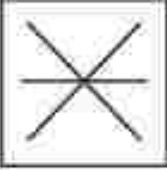

Correct Marks : 5 Wrong Marks : 1

Question Key Details :

Key	Value
Comprehension	MCQ

ఇవ్వబడిన ఎంపికల్లో ఏ చిత్రం భర్త చేయగలదు ?



- (1) 
- (2) 
- (3) 
- (4) 

Options :

212807119149 1

212807119150 2

212807119151 3

212807119152 4

Question Number : 303 Question Id : 21280719788 Question Type : MCQ Option Shuffling : No Is Question Mandatory : No Calculator : None

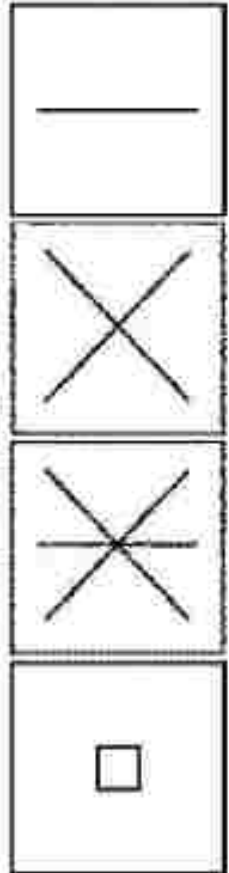

Response Time : N.A Think Time : N.A Minimum Instruction Time : 0

Correct Marks : 5 Wrong Marks : 1

Question Key Details :

Key	Value
Comprehension	MCQ

رے کے انتخاب میں سے کان بنی شکل جو لے گی ۳



Options :

212807119149 1

212807119150 1

212807119151 3

212807119153 4

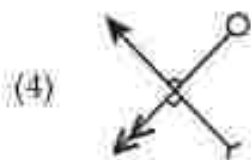

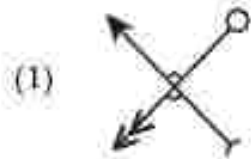
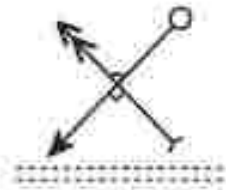
Question Number : 354 Question Id : 21280719789 Question Type : MCQ Option Shuffling : No Is Question Mandatory : No Calculator : None
Response Time : N.A Think Time : N.A Minimum Instruction Time : 0

Correct Marks : 3 Wrong Marks : 1

Question Key Details :

Key	Value
-----	-------

Choose the correct water image of the figure .:



Options :

212807119153-1

212807119154-2

212807119155-3

212807119156-4

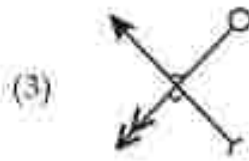
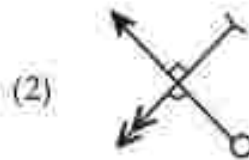
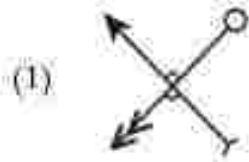
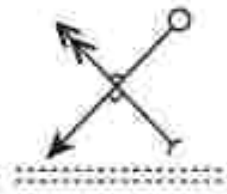
Question Number : 304 Question Id : 21280719789 Question Type : MCQ Option Shuffling : No Is Question Mandatory : No Calculator : None
Response Time : N.A Think Time : N.A Minimum Instruction Time : 0

Correct Marks : 5 Wrong Marks : 1

Question Key Details :

Key	Value
Comprehension	MCQ

निम्नांकित आकृति के सही जल प्रतिबिम्ब का चयन कीजिए :



Options :

212807119153-1

212807119154-2

212807119155-3

212807119156-4


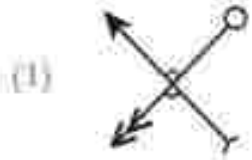
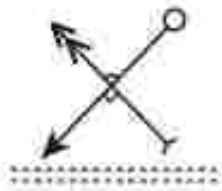
Question Number : 304 Question Id : 21280719789 Question Type : MCQ Option Shuffling : No Is Question Mandatory : No Calculator : None
Response Time : N.A Think Time : N.A Minimum Instruction Time : 0

Correct Marks : 5 Wrong Marks : 1

Question Key Detail :

Key	Value
Comprehension	MCQ

তলৰ চিত্ৰটোৰ শুদ্ধ প্ৰতিবিস্তাৰ চিনাক্ত কৰা :

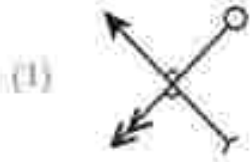
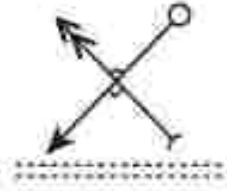


- Options :-
212807119153-1
212807119154-2
212807119155-3
212807119156-4

Question Number : 304 Question Id : 21280719789 Question Type : MCQ Option Shuffling : No Is Question Mandatory : No Calculator : None
Response Time : N.A Think Time : N.A Minimum Instruction Time : 0
Correct Marks : 5 Wrong Marks : 1
Question Key Detail :

Key	Value
Comprehension	MCQ

প্রদত্ত চিত্রের সঠিক জলের প্রতিচ্ছবি নির্বাচন করো।

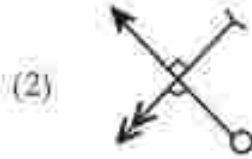
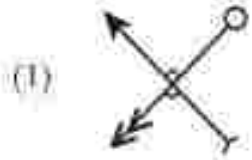
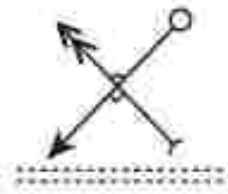


Options :-
212807119153-1
212807119154-2
212807119155-3
212807119156-4

Question Number : 304 Question Id : 21280719789 Question Type : MCQ Option Shuffling : No Is Question Mandatory : No Calculator : None
Response Time : N.A Think Time : N.A Minimum Instruction Time : 0
Correct Marks : 5 Wrong Marks : 1
Question Key Detail :

Key	Value
Comprehension	MCQ

આપેલ આકૃતિની યોગ્ય પાણીની છબી (correct water image) પસંદ કરો.



- Options :-
212807119153-1
212807119154-2
212807119155-3
212807119156-4

Question Number : 304 Question Id : 21280719789 Question Type : MCQ Option Shuffling : No Is Question Mandatory : No Calculator : None
Response Time : N.A Think Time : N.A Minimum Instruction Time : 0
Correct Marks : 5 Wrong Marks : 1
Question Key Detail :

Key	Value
Comprehension	MCQ

ಚಿತ್ರದ ಸರಿಯಾದ ಜಲವಿಂಬವನ್ನು ಆರಿಸಿ.



(1)



(2)



(3)



(4)



Options :

112807119153-1

112807119154-1

112807119155-3

112807119156-4

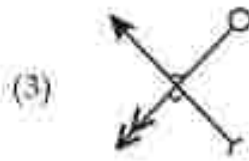
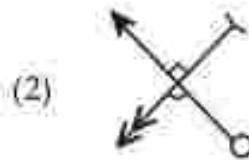
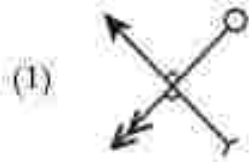
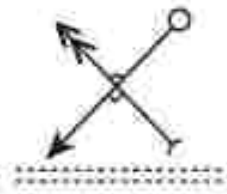
Question Number : 304 Question Id : 11280729789 Question Type : MCQ Option Shuffling : No Is Question Mandatory : No Calculator : None
Response Time : N.A Think Time : N.A Minimum Instruction Time : 0

Correct Marks : 5 Wrong Marks : 1

Question Key Details :

Key	Value
Comprehension	SSCQ

दिलेल्या आकृतीचे पाण्यातील योग्य प्रतिबिंब निवडा.



Options :

212807119153-1

212807119154-2

212807119155-3

212807119156-4

Question Number : 304 Question Id : 21280719789 Question Type : MCQ Option Shuffling : No Is Question Mandatory : No Calculator : None

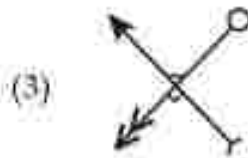
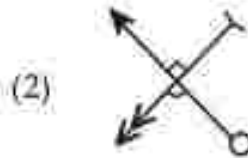
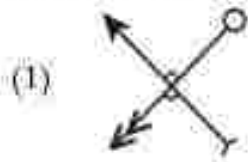
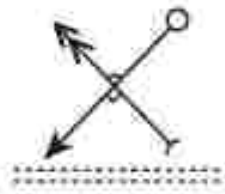
Response Time : N.A Think Time : N.A Minimum Instruction Time : 0

Correct Marks : 5 Wrong Marks : 1

Question Key Details :

Key	Value
Comprehension	MCQ

തന്നിട്ടുള്ള ചിത്രത്തിന്റെ ജലോപരിതലത്തിലെ പ്രതിബിംബം കണ്ടെത്തുക.



Options :

212807119153-1

212807119154-2

212807119155-3

212807119156-4

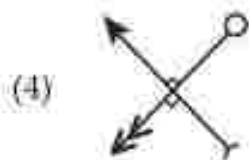
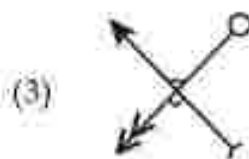
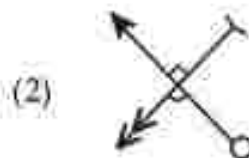
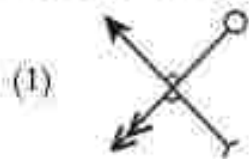
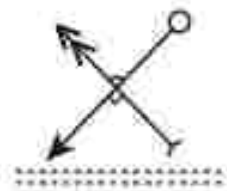
Question Number : 304 Question Id : 21280719789 Question Type : MCQ Option Shuffling : No Is Question Mandatory : No Calculator : None
Response Time : N.A Think Time : N.A Minimum Instruction Time : 0

Correct Marks : 5 Wrong Marks : 1

Question Key Details :

Key	Value
Comprehension	MCQ

ଛତ୍ରର ଧରଣ ବର୍ତ୍ତମାନ ପ୍ରତିନିଧିତା କରାଏ ।



Options :

212807119153-1

212807119154-2

212807119155-3

212807119156-4

Question Number : 304 Question Id : 21280719789 Question Type : MCQ Option Shuffling : No Is Question Mandatory : No Calculator : None


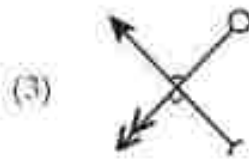
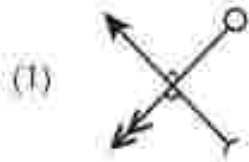
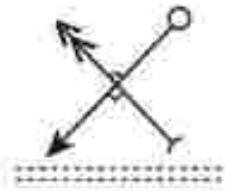
Response Time : N.A Think Time : N.A Minimum Instruction Time : 0

Correct Marks : 5 Wrong Marks : 1

Question Key Details :

Key	Value
Comprehension	MCQ

ਉਹ ਚਿੱਤਰ ਲੱਭੋ ਜੋ ਸਹੀ ਖਾਣੀ ਦੀ ਤਸਵੀਰ ਪੇਸ਼ ਕਰਦਾ ਹੈ ।



Options :

212807119153-1

212807119154-2

212807119155-3

212807119156-4

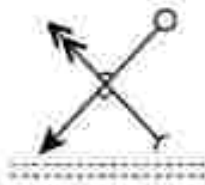
Question Number : J04 Question Id : 21280719789 Question Type : MCQ Option Shuffling : No Is Question Mandatory : No Calculator : None
Response Time : N.A Think Time : N.A Minimum Instruction Time : 0

Correct Marks : 5 Wrong Marks : 1

Question Key Details :

Key	Value
Comprehension	MCQ

பு.த்தின் சரியான நீர் பு.த்தைத் தேர்ந்தெடுக்கவும்.



(1)



(2)



(3)



(4)



Options :

212807119153-1

212807119154-1

212807119153-3

212807119156-4


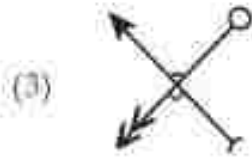
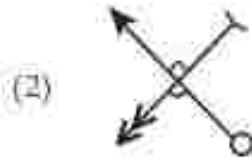
Question Number : 304 Question Id : 21280719789 Question Type : MCQ Option Shuffling : No Is Question Mandatory : No Calculator : None
Response Time : N.A Think Time : N.A Minimum Instruction Time : 0

Correct Marks : 5 Wrong Marks : 1

Question Key Details :

Key	Value
Comprehension	MCQ

పదేన నీటి బింజుస్సె ఎస్సుకోండి.



Options :

212807119153 1

212807119154 2

212807119155 3

212807119156 4


Question Number : 304 Question Id : 21280719789 Question Type : MCQ Option Shuffling : No Is Question Mandatory : No Calculator : None
Response Time : N.A Think Time : N.A Minimum Instruction Time : 0

Correct Marks : 5 Wrong Marks : 1

Question Key Details :

Key	Value
Comprehension	MCQ

شکل کی درست آبی تصویر کو چنیں :



(1)



(2)



(3)



(4)

Options :

212807119153 1

212807119154 2

212807119155 3

212807119156 4

Question Number : 305 Question Id : 21280729790 Question Type : MCQ Option Shuffling : No Is Question Mandatory : No Calculator : None :
Response Time : N.A Think Time : N.A Minimum Instruction Time : 0

Correct Marks : 5 Wrong Marks : 1

Question Key Details :

Key	Value
Comprehension	MCQ

Choose the word which is different from the sequence :

EH13, PR34, RU39, KN25

- (1) EH13
- (2) PR34
- (3) RU39
- (4) KN25

Options :

212807119157-1

212807119158-2

212807119159-3

212807119160-4

Question Number : 105 Question Id : 21280719790 Question Type : MCQ Option Shuffling : No Is Question Mandatory : No Calculator : None
Response Time : N.A Think Time : N.A Minimum Instruction Time : 0

Correct Marks : 5 Wrong Marks : 1

Question Key Details :

Key	Value
Comprehension	MCQ

उस शब्द का चयन कीजिए, जो अनुक्रम EH13, PR34, RU39, KN25 से भिन्न है ?

- (1) EH13
- (2) PR34
- (3) RU39
- (4) KN25

Options :

212807119157-1

212807119158-2

212807119159-3

212807119160-4

Question Number : 305 Question Id : 21280719790 Question Type : MCQ Option Shuffling : No Is Question Mandatory : No Calculator : None
Response Time : N.A Think Time : N.A Minimum Instruction Time : 0

Correct Marks : 5 Wrong Marks : 1

Question Key Details :

Key	Value
Comprehension	MCQ

उन शब्दों में से भिन्न शब्द चुनिए ?

EH13, PR34, RU39, KN25

- (1) EH13
- (2) PR34
- (3) RU39
- (4) KN25

Options :

212807119157-1

212807119158-2

212807119159-3

212807119160-4

Question Number : 305 Question Id : 21280719790 Question Type : MCQ Option Shuffling : No Is Question Mandatory : No Calculator : None
Response Time : N.A Think Time : N.A Minimum Instruction Time : 0

Correct Marks : 5 Wrong Marks : 1

Question Key Details :

Key	Value
-----	-------

ತ್ರಯೇ ಪ್ರದತ್ತ ಅರ್ಥವಾದ ಶಬ್ದವನ್ನು ನಿರ್ಧರಿಸಿ.

EH13, PR34, RU39, KN25

- (1) EH13
- (2) PR34
- (3) RU39
- (4) KN25

Options :

212807119157 1

212807119158 2

212807119159 3

212807119160 4

Question Number : 305 Question Id : 21280719790 Question Type : MCQ Option Shuffling : No Is Question Mandatory : No Calculator : None
Response Time : N.A Think Time : N.A Minimum Instruction Time : 0

Correct Marks : 5 Wrong Marks : 1

Question Key Details :

Key	Value
Comprehension	MCQ

ಅನುಕ್ರಮ ಮಾಂಥಿ ಲುದಿ ಸಂಘ ಪಸೆ ಕರೆ.

EH13, PR34, RU39, KN25

- (1) EH13
- (2) PR34
- (3) RU39
- (4) KN25

Options :

212807119157 1

212807119158 2

212807119159 3

212807119160 4

Question Number : 305 Question Id : 21280719790 Question Type : MCQ Option Shuffling : No Is Question Mandatory : No Calculator : None
Response Time : N.A Think Time : N.A Minimum Instruction Time : 0

Correct Marks : 5 Wrong Marks : 1

Question Key Details :

Key	Value
Comprehension	MCQ

ಅನುಕ್ರಮಣಿಕೆಯಲ್ಲಿ ವ್ಯಕ್ತಿಸಿರುವ ಪದವನ್ನು ಆರಿಸಿ.

EH13, PR34, RU39, KN25

- (1) EH13
- (2) PR34
- (3) RU39
- (4) KN25

Options :

212807119157 1

212807119158 2

212807119159 3

212807119160 4

Question Number : 305 Question Id : 21280719790 Question Type : MCQ Option Shuffling : No Is Question Mandatory : No Calculator : None
Response Time : N.A Think Time : N.A Minimum Instruction Time : 0

Correct Marks : 5 Wrong Marks : 1

Question Key Details :

Key	Value
Comprehension	MCQ

साखळीत न असणारा पर्याय निवडा :

EH13, PR34, RU39, KN25

- (1) EH13
- (2) PR34
- (3) RU39
- (4) KN25

Options :

212807119157 1
212807119158 2
212807119159 3
212807119160 4

Question Number : 305 Question Id : 21280729790 Question Type : MCQ Option Shuffling : No Is Question Mandatory : No Calculator : None
Response Time : N.A Think Time : N.A Minimum Instruction Time : 0

Correct Marks : 5 Wrong Marks : 1

Question Key Details :

Key	Value
Comprehension	MCQ

കൂട്ടത്തിൽ വ്യത്യസ്തമായത് കണ്ടെത്തുക.

EH13, PR34, RU39, KN25

- (1) EH13
- (2) PR34
- (3) RU39
- (4) KN25

Options :

212807119157 1
212807119158 2
212807119159 3
212807119160 4

Question Number : 305 Question Id : 21280729790 Question Type : MCQ Option Shuffling : No Is Question Mandatory : No Calculator : None
Response Time : N.A Think Time : N.A Minimum Instruction Time : 0

Correct Marks : 5 Wrong Marks : 1

Question Key Details :

Key	Value
Comprehension	MCQ

ଉତ୍ତରରେ ଭିନ୍ନ ଉତ୍ତର ଦାଉ :

EH13, PR34, RU39, KN25

- (1) EH13
- (2) PR34
- (3) RU39
- (4) KN25

Options :

212807119157 1
212807119158 2
212807119159 3
212807119160 4

Question Number : 305 Question Id : 21280719790 Question Type : MCQ Option Shuffling : No Is Question Mandatory : No Calculator : None
Response Time : N.A Think Time : N.A Minimum Instruction Time : 0

Correct Marks : 5 Wrong Marks : 1

Question Key Details :

Key	Value
Comprehension	MCQ

ਇਸ ਲਈ ਵਿਚ ਕਿਹੜਾ ਸਬਦ ਅਲਗ ਹੈ ਉਸਨੂੰ ਲੱਭੋ :

EH13, PR34, RU39, KN25

- (1) EH13
- (2) PR34
- (3) RU39
- (4) KN25

Options :

212807119157-1

212807119158-1

212807119159-3

212807119160-4

Question Number : 305 Question Id : 21280719790 Question Type : MCQ Option Shuffling : No Is Question Mandatory : No Calculator : None
Response Time : N.A Think Time : N.A Minimum Instruction Time : 0

Correct Marks : 5 Wrong Marks : 1

Question Key Details :

Key	Value
Comprehension	MCQ

வரிசையிலிருந்து வேறுபட்ட சொல்லைத் தேர்ந்தெடுக்கவும்.

EH13, PR34, RU39, KN25

- (1) EH13
- (2) PR34
- (3) RU39
- (4) KN25

Options :

212807119157-1

212807119158-1

212807119159-3

212807119160-4

Question Number : 305 Question Id : 21280719790 Question Type : MCQ Option Shuffling : No Is Question Mandatory : No Calculator : None
Response Time : N.A Think Time : N.A Minimum Instruction Time : 0

Correct Marks : 5 Wrong Marks : 1

Question Key Details :

Key	Value
Comprehension	MCQ

క్రీటిల్ ఫిన్షంగా ఉన్న పదాన్ని గుర్తించండి.

EH13, PR34, RU39, KN25

- (1) EH13
- (2) PR34
- (3) RU39
- (4) KN25

Options :

212807119157-1

212807119158-2

212807119159-3

212807119160-4

Question Number : 305 Question Id : 21280729790 Question Type : MCQ Option Shuffling : No Is Question Mandatory : No Calculator : None
Response Time : N.A Think Time : N.A Minimum Instruction Time : 0

Correct Marks : 5 Wrong Marks : 1

Question Key Details :

Key	Value
Comprehension	MCQ

اس الفاظ کو جنہیں جو سلسلہ سے الگ ہے ؟

EH13, PR34, RU39, KN25

- EH13 (1)
- PR34 (2)
- RU39 (3)
- KN25 (4)

Options :

212807119157-1

212807119158-2

212807119159-3

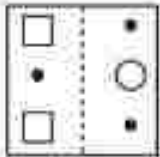
212807119160-4

Question Number : 306 Question Id : 21280729791 Question Type : MCQ Option Shuffling : No Is Question Mandatory : No Calculator : None
Response Time : N.A Think Time : N.A Minimum Instruction Time : 0

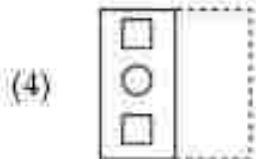
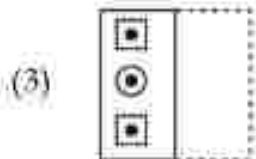
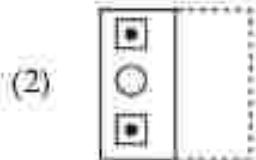
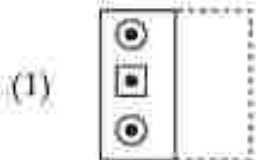
Correct Marks : 5 Wrong Marks : 1

Question Key Details :

Key	Value
Comprehension	MCQ



Which among the following figure would form after folding along the dotted line ?



Options :

112807119161 1

212507119162 2

212807119163 3

212807119164 4

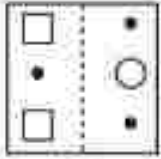
Question Number : 306 Question Id : 21280729791 Question Type : MCQ Option Skuffling : No Is Question Mandatory : No Calculator : None

Response Time : N.A Think Time : N.A Minimum Instruction Time : 0

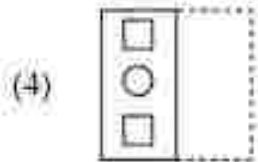
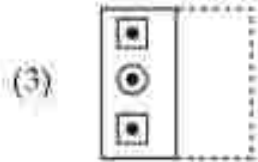
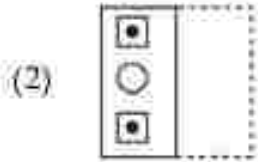
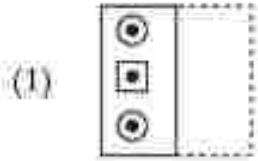
Correct Marks : 5 Wrong Marks : 1

Question Key Details :

Key	Value
Comprehension	MCQ



निम्नलिखित में से कौन-सी आकृति बिंदुतरेखा के अनुदिश मोड़ने पर बनेगी ?



Options :

212507119161-1

212507119162-2

212507119163-3

212507119164-4

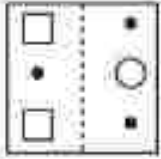
Question Number : 306 Question Id : 212507119161 Question Type : MCQ Option Shuffling : No Is Question Mandatory : No Calculator : None

Response Time : N.A Think Time : N.A Minimum Instruction Time : 0

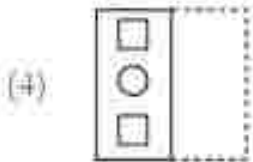
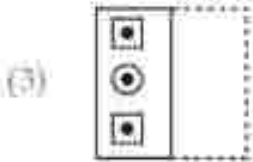

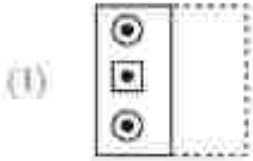
Correct Marks : 5 Wrong Marks : 1

Question Key Details :

Key	Value
Comprehension	MCQ



বিন্দু বোঝার ভাঁজত ভাঁজ কবিলে তলর কোনটো চিত্র উপর হ'খ চিনাক কবা।



Options :

212507119161-1

212507119162-2

212507119163-3

212507119164-4

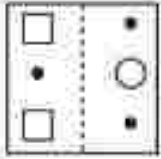
Question Number : 306 Question Id : 21250719791 Question Type : MCQ Option Shuffling : No Is Question Mandatory : No Calculator : None

Response Time : N.A Think Time : N.A Minimum Instruction Time : 0

Correct Marks : 5 Wrong Marks : 1

Question Key Details :

Key	Value
Comprehension	MCQ



বিন্দুযুক্ত রেখা প্রকারে প্রদত্ত চিত্রটিকে ভাঁজ করলে নিম্নের কোন চিত্রটি পাওয়া যাবে ?

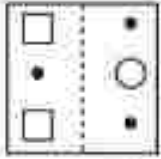
- (1)
- (2)
- (3)
- (4)

Options :

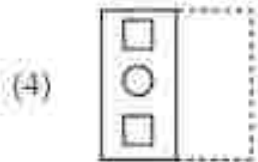
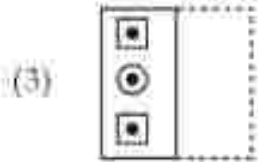
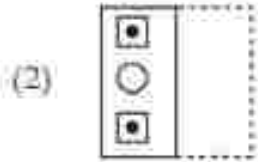
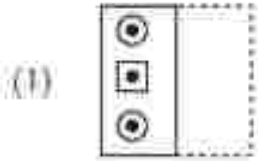
- 212507119161-1
 212507119162-2
 212507119163-3
 212507119164-4

Question Number : 306 Question Id : 21250719791 Question Type : MCQ Option Shuffling : No Is Question Mandatory : No Calculator : None
 Response Time : N.A Think Time : N.A Minimum Instruction Time : 0
 Correct Marks : 5 Wrong Marks : 1
 Question Key Details :

Key	Value
Comprehension	MCQ



टपकायाणी रेखा (डॉटेड लाईन) साथे वाज्या (डोल्ड) इयां पछी नीचेना आपेला पेडी इई आकृति बनरो?



Options :

212507119161 1

212507119162 2

212507119163 3

212507119164 4


Question Number : 306 Question Id : 212507119161 Question Type : MCQ Option Shuffling : No Is Question Mandatory : No Calculator : None

Response Time : N.A Think Time : N.A Minimum Instruction Time : 0

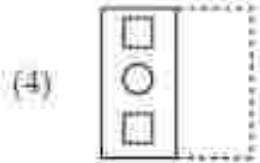
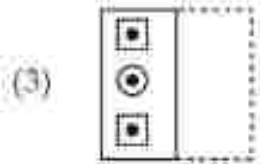
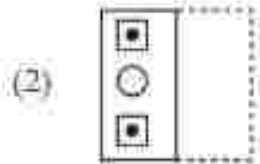
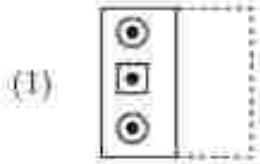
Correct Marks : 5 Wrong Marks : 1

Question Key Details :

Key	Value
Comprehension	MCQ



ಈ ಕೆಳಗಿನವುಗಳಲ್ಲಿ ಯಾವುದೊಂದು ಚಿತ್ರವು ಚುಕ್ಕೆ ಫಲಿತ ರೇಖೆಯ ಮೇಲೆ ಮೂಡಿಸಿದುದ ರಚನೆಯಾಗುತ್ತದೆ ?



Options :

212807119161 1

212807119162 2

212807119163 3

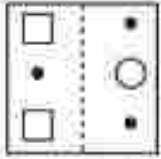
212807119164 4

Question Number : 306 Question Id : 21280719791 Question Type : MCQ Option Shuffling : No Is Question Mandatory : No Calculator : None
Response Time : N.A Think Time : N.A Minimum Instruction Time : 0

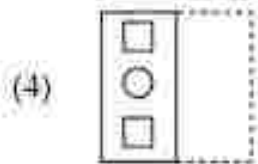
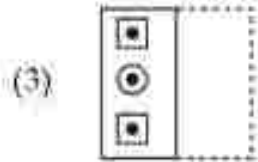
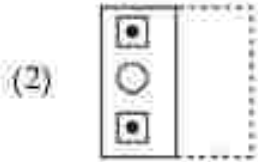
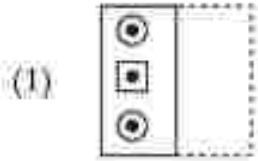
Correct Marks : 5 Wrong Marks : 1

Question Key Details :

Key	Value
Comprehension	MCQ



टिपक्यांच्या रेधेजवळ दुमदल्यास पुढीलपैकी कोणती आकृती तयार होईल?



Options :

212507119161-1

212507119162-2

212507119163-3

212507119164-4

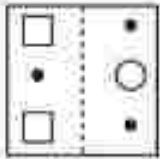
Question Number : 306 Question Id : 212507119161 Question Type : MCQ Option Shuffling : No Is Question Mandatory : No Calculator : None

Response Time : N.A Think Time : N.A Minimum Instruction Time : 0

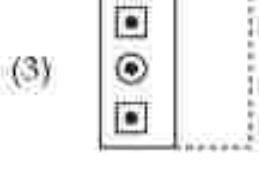
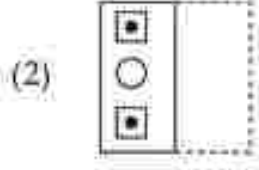
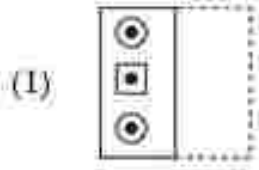
Correct Marks : 5 Wrong Marks : 1

Question Key Details :

Key	Value
Comprehension	MCQ




തന്നിട്ടുള്ള ചിത്രം കൃത്യകൾ ഇട്ട ഭാഗത്ത് കൂടി മടക്കിയാൽ ലഭിക്കുന്ന ചിത്രം താഴെ തന്നിട്ടുള്ളതിൽ ഏതായിരിക്കും ?



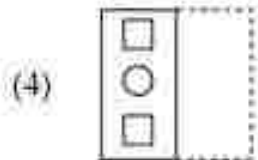
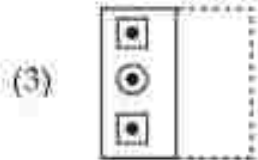
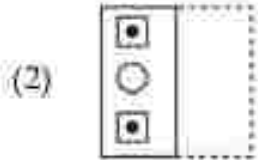
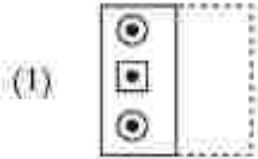
- Options :
- 212807119161 1
 - 212807119162 2
 - 212807119163 3
 - 212807119164 4

Question Number : 306 Question Id : 21280719791 Question Type : MCQ Option Shuffling : No Is Question Mandatory : No Calculator : None
 Response Time : N.A Think Time : N.A Minimum Instruction Time : 0
 Correct Marks : 5 Wrong Marks : 1
 Question Key Details :

Key	Value
Comprehension	MCQ



ବିରୁଦ୍ଧାଗମ୍ଭୂତିକୁ ଗାଢ଼ିକେତେକ ନିମ୍ନୋକ୍ତ ଲେଖି ଛବିଟି ସୃଷ୍ଟି ହୋଇ ?



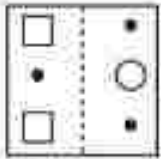
Options :

- 212507119161-1
- 212507119162-3
- 212507119163-3
- 212507119164-4

Question Number : 306 Question Id : 21250719791 Question Type : MCQ Option Shuffling : No Is Question Mandatory : No Calculator : None
 Response Time : N.A Think Time : N.A Minimum Instruction Time : 0
 Correct Marks : 5 Wrong Marks : 1

Question Key Details :

Key	Value
Comprehension	MCQ



ਬਿੱਚੀ ਵਾਲੀ ਲਾਈਨ ਨੂੰ ਫੇਲਡ ਕਰਨ ਕੇ ਖਾਸ ਹੇਠਾਂ ਦਿੱਤੇ ਚਿੱਤਰ ਵਿੱਚੋਂ ਕਿਹੜਾ ਹੋਵੇਗਾ?

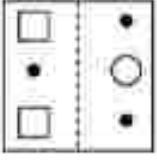
- (1)
- (2)
- (3)
- (4)

Options :

- 212507119161:1
 212507119162:3
 212507119163:3
 212507119164:4

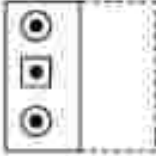
Question Number : 306 Question Id : 212507119161 Question Type : MCQ Option Shuffling : No Is Question Mandatory : No Calculator : None
 Response Time : N.A Think Time : N.A Minimum Instruction Time : 0
 Correct Marks : 5 Wrong Marks : 1
 Question Key Details :

Key	Value
Comprehension	MCQ

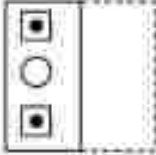


புள்ளிக் கோட்டில் மடிக்க பிறகு பின்வருவனவற்றில் எது உருவாகும்?

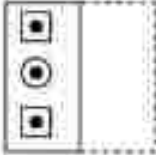
(1)



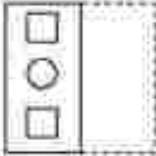
(2)



(3)



(4)



Options :


- 212807119161-1
- 212807119162-2
- 212807119163-3
- 212807119164-4

Question Number : 356 Question Id : 21280719791 Question Type : MCQ Option Shuffling : No Is Question Mandatory : No Calculator : None Response Time : N.A Think Time : N.A Minimum Instruction Time : 0

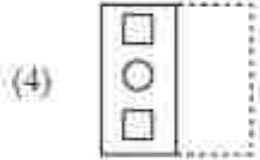
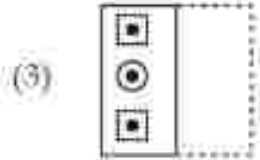
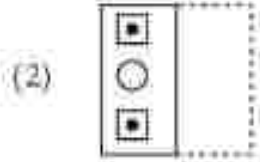
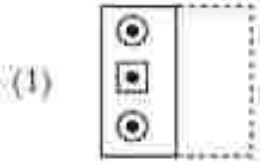
Correct Marks : 5 Wrong Marks : 1

Question Key Details :

Key	Value
Comprehension	MCQ



చుక్కల శేఖ వెంబడి మడత పెట్టగా కింది వాటిలో ఏ చిత్రం ఏర్పడుతుంది ?



Options :

112807119161 1

112807119162 2

112807119163 3

112807119164 4

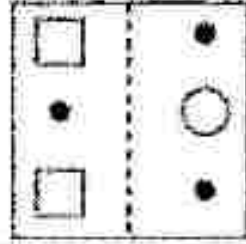
Question Number : 306 Question Id : 21280729791 Question Type : MCQ Option Skuffing : No Is Question Mandatory : No Calculator : None
Response Time : N.A Think Time : N.A Minimum Instruction Time : 0

Correct Marks : 5 Wrong Marks : 1

Question Key Details :

Key	Value
Comprehension	MCQ

منقولہ ایکسپرٹ کرنے کے بعد مندرجہ ذیل میں سے کون سی شکل بنے گی ؟



- (1)
- (2)
- (3)
- (4)

Options :

212807119161. 1

212807119162. 2

212807119163. 3

212807119164. 4

Question Number : 307 Question Id : 21280729792 Question Type : MCQ Option Shuffling : No Is Question Mandatory : No Calculator : None

Response Time : N.A Think Time : N.A Minimum Instruction Time : 0

Correct Marks : 5 Wrong Marks : 1

Question Key Details :

Key	Value
Comprehension	MCQ

	9
4	12

	12
8	32

	9
9	?

What is the missing term ?

- (1) 24
 (2) 27
 (3) 64
 (4) 17

Options :

- 212807119165:1
 212807119166:2
 212807119167:3
 212807119168:4

Question Number : 307 Question Id : 21280729792 Question Type : MCQ Option Shuffling : No Is Question Mandatory : No Calculator : None
 Response Time : N.A Think Time : N.A Minimum Instruction Time : 0

Correct Marks : 5 Wrong Marks : 1

Question Key Details :

Key	Value
Comprehension	MCQ

	9
4	12

	12
8	32

	9
9	?

उपर्युक्त में अविद्यमान पद क्या है ?

- (1) 24
 (2) 27
 (3) 64
 (4) 17

Options :

- 212807119165:1
 212807119166:2
 212807119167:3
 212807119168:4

Question Number : 307 Question Id : 21280729792 Question Type : MCQ Option Shuffling : No Is Question Mandatory : No Calculator : None
 Response Time : N.A Think Time : N.A Minimum Instruction Time : 0

Correct Marks : 5 Wrong Marks : 1

Question Key Details :

Key	Value
Comprehension	MCQ

	9
4	12

	12
8	32

	9
9	?

নথকা শব্দটি সংখ্যাটো উলিওৱা :

- (1) 24
 (2) 27
 (3) 64
 (4) 17

Options :

- 212807119165:1

212507119165.1
212507119167.3
212507119165.4

Question Number : 307 Question Id : 21250729792 Question Type : MCQ Option Shuffling : No Is Question Mandatory : No Calculator : None
Response Time : N.A Think Time : N.A Minimum Instruction Time : 0

Correct Marks : 5 Wrong Marks : 1

Question Key Details :

Key	Value
Comprehension	MCQ

	9		12		9
4	12	8	32	9	?

অনুপস্থিত পদটি কী হবে ?

- (1) 24
(2) 27
(3) 64
(4) 17

Options :

212507119165.1
212507119165.2
212507119167.3
212507119168.4

Question Number : 307 Question Id : 21250729792 Question Type : MCQ Option Shuffling : No Is Question Mandatory : No Calculator : None
Response Time : N.A Think Time : N.A Minimum Instruction Time : 0

Correct Marks : 5 Wrong Marks : 1

Question Key Details :

Key	Value
Comprehension	MCQ

	9		12		9
4	12	8	32	9	?

পূর্তী উন্নত কী হবে?

- (1) 24
(2) 27
(3) 64
(4) 17

Options :

212507119165.1
212507119166.2
212507119167.3
212507119168.4

Question Number : 307 Question Id : 21250729792 Question Type : MCQ Option Shuffling : No Is Question Mandatory : No Calculator : None
Response Time : N.A Think Time : N.A Minimum Instruction Time : 0

Correct Marks : 5 Wrong Marks : 1

Question Key Details :

Key	Value
Comprehension	MCQ

	9		12		9
4	12	8	32	9	?

ಕಣ್ಣಿಯಾದ ಪದವೇನು ?

- (1) 24
 (2) 27
 (3) 64
 (4) 17

Options :

- 212807119165.1
 212807119166.1
 212807119167.3
 212807119165.4

Question Number : 307 Question Id : 21280729792 Question Type : MCQ Option Shuffling : No Is Question Mandatory : No Calculator : None
 Response Time : N.A Think Time : N.A Minimum Instruction Time : 0

Correct Marks : 5 Wrong Marks : 1

Question Key Details :

Key	Value
Comprehension	MCQ

	9		12		9
4	12	8	32	9	?

प्रश्नचिन्हाच्या जागी कोणती संख्या येईल ?

- (1) 24
 (2) 27
 (3) 64
 (4) 17

Options :

- 212807119165.1
 212807119166.1
 212807119167.3
 212807119165.4

Question Number : 307 Question Id : 21280729792 Question Type : MCQ Option Shuffling : No Is Question Mandatory : No Calculator : None
 Response Time : N.A Think Time : N.A Minimum Instruction Time : 0

Correct Marks : 5 Wrong Marks : 1

Question Key Details :

Key	Value
Comprehension	MCQ

	9		12		9
4	12	8	32	9	?

വിളിച്ചു പറയുന്ന പദത്തെ പൂരിപ്പിക്കുക.

- (1) 24
 (2) 27
 (3) 64
 (4) 17

Options :

- 212807119165.1

212507119165.1
212507119167.3
212507119165.4

Question Number : 307 Question Id : 21250729792 Question Type : MCQ Option Shuffling : No Is Question Mandatory : No Calculator : None
Response Time : N.A Think Time : N.A Minimum Instruction Time : 0

Correct Marks : 5 Wrong Marks : 1

Question Key Details :

Key	Value
Comprehension	MCQ

	9		12		9
4	12	8	32	9	?

ବେଗର ଏକ ବର୍ਗ-ਮାଳ-ପୁଞ୍ଜ ସଂଖ୍ୟା ?

- (1) 24
- (2) 27
- (3) 64
- (4) 17

Options :

212507119165.1
212507119165.3
212507119167.3
212507119168.4

Question Number : 307 Question Id : 21250729792 Question Type : MCQ Option Shuffling : No Is Question Mandatory : No Calculator : None
Response Time : N.A Think Time : N.A Minimum Instruction Time : 0

Correct Marks : 5 Wrong Marks : 1

Question Key Details :

Key	Value
Comprehension	MCQ

	9		12		9
4	12	8	32	9	?

ਇਸ ਵਿਚ ਗୁଣିତੀ ਹੋਈ ਮਿਆਦ ਕਿਹੜੀ ਹੈ ?

- (1) 24
- (2) 27
- (3) 64
- (4) 17

Options :

212507119165.1
212507119165.3
212507119167.3
212507119168.4

Question Number : 307 Question Id : 21250729792 Question Type : MCQ Option Shuffling : No Is Question Mandatory : No Calculator : None
Response Time : N.A Think Time : N.A Minimum Instruction Time : 0

Correct Marks : 5 Wrong Marks : 1

Question Key Details :

Key	Value
Comprehension	MCQ

	9
4	12

	12
8	32

	9
9	?

காணாமல் போன சொல் என்ன?

- (1) 24
(2) 27
(3) 64
(4) 17

Options :

212507119165-1

212507119165-2

212507119167-3

212507119165-4

Question Number : 307 Question Id : 21250719792 Question Type : MCQ Option Shuffling : No Is Question Mandatory : No Calculator : None
Response Time : N.A Think Time : N.A Minimum Instruction Time : 0

Correct Marks : 5 Wrong Marks : 1

Question Key Details :

Key	Value
Comprehension	MCQ

	9
4	12

	12
8	32

	9
9	?

கீழ்க்கண்ட விதி ?

- (1) 24
(2) 27
(3) 64
(4) 17

Options :

212507119165-1

212507119165-2

212507119167-3

212507119165-4

Question Number : 307 Question Id : 21250719792 Question Type : MCQ Option Shuffling : No Is Question Mandatory : No Calculator : None
Response Time : N.A Think Time : N.A Minimum Instruction Time : 0

Correct Marks : 5 Wrong Marks : 1

Question Key Details :

Key	Value
Comprehension	MCQ

4	9
12	18

8	12
32	48

گمشدہ نمبر کیا ہے ؟

9	?
?	?

24 (1)

27 (2)

64 (3)

17 (4)

Options :

212807119165.1

212807119166.1

212807119167.3

212807119168.4

Question Number : 308 Question Id : 21280729753 Question Type : MCQ Option Shuffling : No Is Question Mandatory : No Calculator : None Response Time : N.A Think Time : N.A Minimum Instruction Time : 0

Correct Marks : 5 Wrong Marks : 1

Question Key Details :

Key	Value
Comprehension	MCQ

What is the missing term ?

3, 8, 15, 24, ?, 48.

(1) 30

(2) 33

(3) 35

(4) 41

Options :

212807119169.1

212807119170.1

212807119171.3

212807119172.4

Question Number : 308 Question Id : 21280729753 Question Type : MCQ Option Shuffling : No Is Question Mandatory : No Calculator : None Response Time : N.A Think Time : N.A Minimum Instruction Time : 0

Correct Marks : 5 Wrong Marks : 1

Question Key Details :

Key	Value
Comprehension	MCQ

निम्नलिखित में अविद्यमान पद क्या है ?

3, 8, 15, 24, ?, 48.

(1) 30

(2) 33

(3) 35

(4) 41

Options :

212807119169.1

212807119170.2

212807119171.3

212807119172.4

Question Number : 395 Question Id : 21280719793 Question Type : MCQ Option Shuffling : No Is Question Mandatory : No Calculator : None
Response Time : N.A Think Time : N.A Minimum Instruction Time : 0

Correct Marks : 5 Wrong Marks : 1

Question Key Details :

Key	Value
Comprehension	MCQ

হেবডি বোবা সংখ্যাটো কি ?

3, 8, 15, 24, ?, 48.

- (1) 30
- (2) 33
- (3) 35
- (4) 41

Options :

212807119169 : 1

212807119170 : 2

212807119171 : 3

212807119172 : 4

Question Number : 398 Question Id : 21280719793 Question Type : MCQ Option Shuffling : No Is Question Mandatory : No Calculator : None
Response Time : N.A Think Time : N.A Minimum Instruction Time : 0

Correct Marks : 5 Wrong Marks : 1

Question Key Details :

Key	Value
Comprehension	MCQ

অনুপস্থিত পদটি কী হবে ?

3, 8, 15, 24, ?, 48.

- (1) 30
- (2) 33
- (3) 35
- (4) 41

Options :

212807119169 : 1

212807119170 : 2

212807119171 : 3

212807119172 : 4

Question Number : 398 Question Id : 21280719793 Question Type : MCQ Option Shuffling : No Is Question Mandatory : No Calculator : None
Response Time : N.A Think Time : N.A Minimum Instruction Time : 0

Correct Marks : 5 Wrong Marks : 1

Question Key Details :

Key	Value
Comprehension	MCQ

পূর্তী হিমত শুঁ ঐ?

3, 8, 15, 24, ?, 48.

- (1) 30
- (2) 33
- (3) 35
- (4) 41

Options :

212807119169 : 1

212507119170 1
212507119171 3
212507119172 4

Question Number : 308 Question Id : 21250729793 Question Type : MCQ Option Shuffling : No Is Question Mandatory : No Calculator : None
Response Time : N.A Think Time : N.A Minimum Instruction Time : 0

Correct Marks : 5 Wrong Marks : 1

Question Key Details :

Key	Value
Comprehension	MCQ

ಕನ್ನಡಿಯಾದ ಪದವೇನು ?

3, 8, 15, 24, __?__, 48.

- (1) 30
- (2) 33
- (3) 35
- (4) 41

Options :

212507119169 1
212507119170 2
212507119171 3
212507119172 4

Question Number : 308 Question Id : 21250729793 Question Type : MCQ Option Shuffling : No Is Question Mandatory : No Calculator : None
Response Time : N.A Think Time : N.A Minimum Instruction Time : 0

Correct Marks : 5 Wrong Marks : 1

Question Key Details :

Key	Value
Comprehension	MCQ

प्रश्नचिन्हाच्या जागी कोणती संख्या येईल ?

3, 8, 15, 24, __?__, 48.

- (1) 30
- (2) 33
- (3) 35
- (4) 41

Options :

212507119169 1
212507119170 2
212507119171 3
212507119172 4

Question Number : 308 Question Id : 21250729793 Question Type : MCQ Option Shuffling : No Is Question Mandatory : No Calculator : None
Response Time : N.A Think Time : N.A Minimum Instruction Time : 0

Correct Marks : 5 Wrong Marks : 1

Question Key Details :

Key	Value
Comprehension	MCQ

විද්‍යු පෙරළ ප්‍රශ්න ?

3, 8, 15, 24, __?__, 48.

- (1) 30
- (2) 33
- (3) 35
- (4) 41

Options :

212807119169-1
212807119170-2
212807119171-3
212807119172-4

Question Number : 305 Question Id : 21280719793 Question Type : MCQ Option Shuffling : No Is Question Mandatory : No Calculator : None
Response Time : N.A Think Time : N.A Minimum Instruction Time : 0

Correct Marks : 5 Wrong Marks : 1

Question Key Details :

Key	Value
Comprehension	MCQ

ඉම්බාලනුමා වාඤ්චා කෙරෙහි ?

3, 8, 15, 24, __?__, 48.

- (1) 30
- (2) 33
- (3) 35
- (4) 41

Options :

212807119169-1
212807119170-2
212807119171-3
212807119172-4

Question Number : 308 Question Id : 21280719793 Question Type : MCQ Option Shuffling : No Is Question Mandatory : No Calculator : None
Response Time : N.A Think Time : N.A Minimum Instruction Time : 0

Correct Marks : 5 Wrong Marks : 1

Question Key Details :

Key	Value
Comprehension	MCQ

ਇਸ ਵਿਚ ਕੁਮੀ ਹੋਈ ਮਿਆਦ ਕਿਹੜੀ ਹੈ?

3, 8, 15, 24, __?__, 48.

- (1) 30
- (2) 33
- (3) 35
- (4) 41

Options :

212807119169-1
212807119170-2
212807119171-3
212807119172-4

Question Number : 308 Question Id : 21280719793 Question Type : MCQ Option Shuffling : No Is Question Mandatory : No Calculator : None
Response Time : N.A Think Time : N.A Minimum Instruction Time : 0

Correct Marks : 5 Wrong Marks : 1

Question Key Details :

Key	Value
Comprehension	MCQ

விடுபட்ட சொல் யாது?

3, 8, 15, 24, __?__, 48.

(1) 30

(2) 33

(3) 35

(4) 41

Options :

212507119169-1

212507119170-2

212507119171-3

212507119172-4

Question Number : 308 Question Id : 21250719793 Question Type : MCQ Option Shuffling : No Is Question Mandatory : No Calculator : None
Response Time : N.A Think Time : N.A Minimum Instruction Time : 0

Correct Marks : 5 Wrong Marks : 1

Question Key Details :

Key	Value
Comprehension	MCQ

తప్పిన పదం ఏది ?

3, 8, 15, 24, __?__, 48.

(1) 30

(2) 33

(3) 35

(4) 41

Options :

212507119169-1

212507119170-2

212507119171-3

212507119172-4

Question Number : 305 Question Id : 21250719793 Question Type : MCQ Option Shuffling : No Is Question Mandatory : No Calculator : None
Response Time : N.A Think Time : N.A Minimum Instruction Time : 0

Correct Marks : 5 Wrong Marks : 1

Question Key Details :

Key	Value
Comprehension	MCQ

شماره نمبر کیا ہے ؟

3, 8, 15, 24, _____, 48.

30 (1)

33 (2)

35 (3)

41 (4)

Options :

212807119169-1

212807119170-2

212807119171-3

212807119172-4

Question Number : 309 Question Id : 21280719794 Question Type : MCQ Option Shuffling : No Is Question Mandatory : No Calculator : None
Response Time : N.A Think Time : N.A Minimum Instruction Time : 0

Correct Marks : 5 Wrong Marks : 1

Question Key Details :

Key	Value
Comprehension	MCQ

Five friends are standing in a row facing South. Jitesh is to the immediate right of Ajay. Prem is between Bobby and Sumit. Sumit is between Jitesh and Prem. Who is at the extreme left end?

(1) Ajay

(2) Prem

(3) Bobby

(4) Sumit

Options :

212807119173-1

212807119174-2

212807119175-3

212807119176-4

Question Number : 309 Question Id : 21280719794 Question Type : MCQ Option Shuffling : No Is Question Mandatory : No Calculator : None
Response Time : N.A Think Time : N.A Minimum Instruction Time : 0

Correct Marks : 5 Wrong Marks : 1

Question Key Details :

Key	Value
Comprehension	MCQ

एक पॉल्ट में पांच मित्र दक्षिण दिशा के सम्मुख खड़े हैं। जितेश, अजय के निकटतम दाएं में है। बॉबी और सुमित के बीच में प्रेम है। जितेश और प्रेम के बीच में सुमित है। तो एकदम बाएं सिरे पर कौन है?

(1) अजय

(2) प्रेम

(3) बॉबी

(4) सुमित

Options :

212807119173-1

212807119174-2

212807119175-3

212807119178.4

Question Number : 309 Question Id : 21280719794 Question Type : MCQ Option Shuffling : No Is Question Mandatory : No Calculator : None
Response Time : N.A Think Time : N.A Minimum Instruction Time : 0
Correct Marks : 5 Wrong Marks : 1

Question Key Details :

Key	Value
Comprehension	MCQ

পাঁচজন বন্ধুরে দক্ষিণ দিকত মুখ কৰি এটা শাৰীত থিয় হৈ আছে। আজয়্যৰ একেবাৰে কাষতে জীতেশ বহি আছে। প্ৰেম, বৰি আৰু সুমিতৰ মাজত বহি আছে। সুমিত জীতেশ আৰু প্ৰেমৰ মাজত বহি আছে। বাঁওফালে একেবাৰে শেষত থিয় হৈ থকাজন কোন ?

- (1) আজয়
- (2) প্ৰেম
- (3) বৰি
- (4) সুমিত

Options :

212807119173.1
212807119174.2
212807119175.3
212807119178.4

Question Number : 309 Question Id : 21280719794 Question Type : MCQ Option Shuffling : No Is Question Mandatory : No Calculator : None
Response Time : N.A Think Time : N.A Minimum Instruction Time : 0
Correct Marks : 5 Wrong Marks : 1

Question Key Details :

Key	Value
Comprehension	MCQ

পাঁচ বন্ধু একসাগৰিত দক্ষিণদিকে মুখ কৰে দাঁড়িয়ে আছে। জীতেশ আছে আজয়্যৰ অধিনত্ৰ জনদিকে, প্ৰেম আছে বৰি আৰু সুমিতৰ মাৰে। সুমিত আছে জীতেশ ও প্ৰেমৰ মাৰে। কে চহৰ বাম প্ৰান্তে আছে ?

- (1) আজয়
- (2) প্ৰেম
- (3) বৰি
- (4) সুমিত

Options :

212807119173.1
212807119174.2
212807119175.3
212807119178.4

Question Number : 309 Question Id : 21280719794 Question Type : MCQ Option Shuffling : No Is Question Mandatory : No Calculator : None
Response Time : N.A Think Time : N.A Minimum Instruction Time : 0
Correct Marks : 5 Wrong Marks : 1

Question Key Details :

Key	Value
Comprehension	MCQ

Statement (I) : In spite of the claim of the Government of terrorism being under check, killing continues.

Conclusions (I) : The terrorists have not come to an understanding with the Government.

(II) : The Government has been constantly telling a lie.

Read the statement and which of the conclusions logically follows to the information given in the statement.

- (1) If only I follows
- (2) If only II follows
- (3) If both I & II follows
- (4) If neither I nor II follows

Options :

212807119177.1

212807119178.2

212807119179.3

212807119180.4

Question Number : 310 Question Id : 21280729795 Question Type : MCQ Option Shuffling : No Is Question Mandatory : No Calculator : None
Response Time : N.A Think Time : N.A Minimum Instruction Time : 0

Correct Marks : 5 Wrong Marks : 1

Question Key Details :

Key	Value
Comprehension	MCQ

कथन (I) : आतंकवाद पर नियंत्रण के सरकार के दावे के बावजूद हत्याएं जारी हैं।

निष्कर्ष (I) : आतंकवादियों का सरकार के साथ समझौता नहीं हुआ है।

(II) : सरकार निरंतर झूठ बोल रही है।

उपर्युक्त कथन को पढ़ें और इस कथन में दो गई सूचना के आधार पर कौन-सा निष्कर्ष तार्किक रूप से अनुसरण करता है ?

- (1) यदि केवल कथन - I का अनुसरण करता है
- (2) यदि केवल कथन - II अनुसरण करता है
- (3) यदि कथन - I और - II दोनों अनुसरण करते हैं
- (4) यदि न तो कथन - I, न ही कथन - II पालन करता है

Options :

212807119177.1

212807119178.2

212807119179.3

212807119180.4

Question Number : 310 Question Id : 21280729795 Question Type : MCQ Option Shuffling : No Is Question Mandatory : No Calculator : None
Response Time : N.A Think Time : N.A Minimum Instruction Time : 0

Correct Marks : 5 Wrong Marks : 1

Question Key Details :

Key	Value
Comprehension	MCQ

উক্তি (I) : চৰকাৰৰ দাবী সত্ত্বেও, সন্ত্ৰাসবাদ অসীমৰ বাহিৰত আছে আৰু হত্যা অব্যাহত আছে।

সিদ্ধান্ত (I) : সন্ত্ৰাসবাদীসকলে চৰকাৰৰ সৈতে আলোচনাত বহা নাই।

(II) : চৰকাৰে নিবন্ধনভাৱে মিছা মতি আহিছে।

উক্তিটো পঢ়া আৰু সিদ্ধান্তসমূহৰ কোনটোৱে যুক্তিসংগতভাৱে উক্তিটোৰ তথ্যখিনি অনুসৰণ কৰে চিনাক্ত কৰা।

- (1) কেৱল I এ অনুসৰণ কৰে
- (2) কেৱল II এ অনুসৰণ কৰে
- (3) I আৰু II দুয়োটিই কৰে
- (4) I আৰু II ৰ এটাইও অনুসৰণ নকৰে

Options :

- 212807119177.1
212807119178.2
212807119179.3
212807119180.4

Question Number : 310 Question Id : 21280719795 Question Type : MCQ Option Shuffling : No Is Question Mandatory : No Calculator : None
Response Time : N.A Think Time : N.A Minimum Instruction Time : 0

Correct Marks : 5 Wrong Marks : 1

Question Key Details :

Key	Value
Comprehension	MCQ

উক্তি (I) : সন্ত্ৰাসবাদ নিয়ন্ত্ৰণে সরকারেৰ দাবী সত্ত্বেও, হত্যা অব্যাহত রয়েছে।

সিদ্ধান্ত (I) : সন্ত্ৰাসবাদীসকলে চৰকাৰৰ সৈতে আলোচনাত বহা নাই।

(II) : সরকারপক্ষ প্রতিনিয়ত মিছা কথা বলে আসছে।

বিবৃতিটি পড় এবং কোন সিদ্ধান্তটি যৌক্তিকভাবে বিবৃতিতে প্রদত্ত তথ্যটি মেনে চলে :

- (1) যদি শুধুমাত্র I অনুসরণ করে
- (2) যদি শুধুমাত্র II অনুসরণ করে
- (3) যদি উভয় I এবং II অনুসরণ করে
- (4) যদি I অথবা II কেউই অনুসরণ করে না

Options :

- 212807119177.1
212807119178.2
212807119179.3
212807119180.4

Question Number : 310 Question Id : 21280719795 Question Type : MCQ Option Shuffling : No Is Question Mandatory : No Calculator : None
Response Time : N.A Think Time : N.A Minimum Instruction Time : 0

Correct Marks : 5 Wrong Marks : 1

Question Key Details :

Key	Value
Comprehension	MCQ

ਕਥਨ (I) : ਆਰਥਿਕ ਬਰਕਾਤ ਨੇ ਬਾਜ਼ਾਰ ਨੂੰ ਵਧੇਰੇ ਖੁੱਲ੍ਹਾ ਕਰ ਦਿੱਤਾ ਹੈ ।

ਕਥਨ (II) : ਬਰਕਾਤ ਬਣਾਉਣ ਵਾਲੇ ਆਰਥਿਕ ਬਾਜ਼ਾਰਾਂ ਨੇ ਵੱਡੇ ਚਿੱਤਾਖਾਰਾਂ ਨੂੰ ਆਕਰਸ਼ਿਤ ਕੀਤਾ ਹੈ ।

(II) : ਬਰਕਾਤ ਨਿਰਧਾਰਤ ਕਾਰਜ ਨੂੰ ਸੁਧਾਰਦੀ ਹੈ ।

ਉੱਚੀਆਂ ਨੂੰ ਨਤੀਜਾ ਵਜੋਂ ਕੋਈ ਵੀ ਸੁਧਾਰ ਕਥਨ (II) ਨੂੰ ਆਕਰਸ਼ਿਤ ਕਰਦੀ ਹੈ ।

- (1) ਕਥਨ (I) ਅਨੁਭਵ ਨੂੰ ਕਰੋ
- (2) ਕਥਨ (II) ਅਨੁਭਵ ਨੂੰ ਕਰੋ
- (3) ਕਥਨ (I) ਅਤੇ (II) ਅਨੁਭਵ ਨੂੰ ਕਰੋ
- (4) ਕਥਨ (I) ਅਤੇ (II) ਕੋਈ ਵੀ ਅਨੁਭਵ ਨੂੰ ਕਰੋ ਨਹੀਂ

Options :

212807119177-1

212807119178-2

212807119179-3

212807119180-4

Question Number : 310 Question Id : 21280719795 Question Type : MCQ Option Shuffling : No Is Question Mandatory : No Calculator : None
Response Time : N.A Think Time : N.A Minimum Instruction Time : 0

Correct Marks : 5 Wrong Marks : 1

Question Key Details :

Key	Value
Comprehension	MCQ

ਬਿਆਨ (I) : ਇਸ ਦੇ ਬਾਵਜੂਦ ਸਰਕਾਰ ਵੱਲੋਂ ਅਭਿਵਾਦ ਦੀ ਕੜੀ ਲਗਾਤਾਰ ਚੈਕਿੰਗ ਕੀਤੀ ਜਾ ਰਹੀ ਹੈ ।

ਬਿਆਨ (II) : ਅਭਿਵਾਦੀਆਂ ਦਾ ਸਰਕਾਰ ਨਾਲ ਸਮਝੌਤਾ ਨਹੀਂ ਹੋਇਆ ਹੈ ।

(II) : ਸਰਕਾਰ ਲਗਾਤਾਰ ਝੂਠ ਦੱਸ ਰਹੀ ਹੈ ।

ਹੇਠ ਲਿਖੇ ਕਥਨ ਪੜ੍ਹੋ ਤੇ ਦੱਸੋ ਕਿ ਇਨ੍ਹਾਂ ਬਿਆਨਾਂ ਵਿਚੋਂ ਕਿਹੜਾ ਸਿੱਟਾ ਨਿਕਲਦਾ ਹੈ ।

- (1) ਅਗਰ ਸਿਰਫ (I) ਪਾਲਣਾ ਕਰਦਾ ਹੈ ।
- (2) ਅਗਰ ਸਿਰਫ (II) ਪਾਲਣਾ ਕਰਦਾ ਹੈ ।
- (3) ਅਗਰ ਦੋਵੇਂ (I) ਅਤੇ (II) ਪਾਲਣਾ ਕਰਦੇ ਹਨ ।
- (4) ਅਗਰ ਨਾ ਹੀ (I) ਤੇ ਨਾ ਹੀ (II) ਪਾਲਣਾ ਕਰਦੇ ਹਨ ।

Options :

212807119177-1

212807119178-2

212807119179-3

212807119180-4

Question Number : 310 Question Id : 21280719795 Question Type : MCQ Option Shuffling : No Is Question Mandatory : No Calculator : None
Response Time : N.A Think Time : N.A Minimum Instruction Time : 0

Correct Marks : 5 Wrong Marks : 1

Question Key Details :

Key	Value
Comprehension	MCQ

بیان (I) : حکومت کا دہشت گردی پر روک تھام کے دعوئی کے باوجود بھی قتل جاری ہے

نتیجہ (I) : دہشت گرد حکومت کے ساتھ سمجھوتے پر نہیں آتے ہیں

نتیجہ (II) : حکومت اگلا تار جھوٹ بول رہی ہے

بیانات کو نمبر سے پڑھیں اور بتائیں کہ کون سا نتیجہ عقلی طور پر بیانات میں دئے گئے معلومات کے مطابق ہیں۔

(1) صرف (I) مطابق ہے

(2) صرف (II) مطابق ہے

(3) (I) اور (II) دونوں مطابق ہیں

(4) نہ (I) مطابق ہے نہ ہی (II)

Options :-

212807119173-1

212807119173-2

212807119173-3

212807119180-4