

Group Id :	540250338
Group Maximum Duration :	60
Group Minimum Duration :	60
Show Attended Group? :	No
Edit Attended Group? :	No
Break time :	0
Group Marks :	250
Is this Group for Examiner? :	No
Examiner permission :	Cant View
Show Progress Bar? :	No

General Test

Section Id :	540250408
Section Number :	1
Section type :	Online
Mandatory or Optional :	Mandatory
Number of Questions :	60
Number of Questions to be attempted :	50
Section Marks :	250
Enable Mark as Answered Mark for Review and Clear Response :	Yes
Maximum Instruction Time :	0
Sub-Section Number :	1
Sub-Section Id :	5402501147
Question Shuffling Allowed :	Yes
Is Section Default? :	null

**Question Number : 201 Question Id : 54025016121 Question Type : MCQ Option Shuffling : No
Is Question Mandatory : No Calculator : None Response Time : N.A Think Time : N.A**

Minimum Instruction Time : 0

Correct Marks : 5 Wrong Marks : 1

Question Key Details :

Key	Value
Comprehension	MCQ

The curved surface area of a right circular cone of height 12 cm and base diameter 10 cm is :

- (1) $65 \pi \text{ cm}^2$
- (2) $75 \pi \text{ cm}^2$
- (3) $130 \pi \text{ cm}^2$
- (4) $100 \pi \text{ cm}^2$

Options :

54025064481. 1

54025064482. 2

54025064483. 3

54025064484. 4

Question Number : 201 Question Id : 54025016121 Question Type : MCQ Option Shuffling : No

Is Question Mandatory : No Calculator : None Response Time : N.A Think Time : N.A

Minimum Instruction Time : 0

Correct Marks : 5 Wrong Marks : 1

Question Key Details :

Key	Value
Comprehension	MCQ

12 सेंमी. ऊँचाई और 10 सेंमी. आधार व्यास के लंब वृत्तीय शंकु का वक्र पृष्ठ क्षेत्रफल है :

- (1) $65 \pi \text{ सेंमी.}^2$
- (2) $75 \pi \text{ सेंमी.}^2$
- (3) $130 \pi \text{ सेंमी.}^2$
- (4) $100 \pi \text{ सेंमी.}^2$

Options :

54025064481. 1

54025064482. 2

54025064483. 3

54025064484. 4

Question Number : 202 Question Id : 54025016122 Question Type : MCQ Option Shuffling : No

Is Question Mandatory : No Calculator : None Response Time : N.A Think Time : N.A

Minimum Instruction Time : 0

Correct Marks : 5 Wrong Marks : 1

Question Key Details :

Key	Value
Comprehension	MCQ

Cost of 6 pens and 9 pencils is ₹ 126. What is the cost of 8 pens and 12 pencils ?

(1) ₹ 156

(2) ₹ 159

(3) ₹ 162

(4) ₹ 168

Options :

54025064485. 1

54025064486. 2

54025064487. 3

54025064488. 4

Question Number : 202 Question Id : 54025016122 Question Type : MCQ Option Shuffling : No

Is Question Mandatory : No Calculator : None Response Time : N.A Think Time : N.A

Minimum Instruction Time : 0

Correct Marks : 5 Wrong Marks : 1

Question Key Details :

Key	Value
Comprehension	MCQ

यदि 6 पेन और 9 पेंसिल की कीमत ₹ 126 है, तो 8 पेन और 12 पेंसिल की कीमत कितनी होगी?

- (1) ₹ 156
- (2) ₹ 159
- (3) ₹ 162
- (4) ₹ 168

Options :

54025064485. 1

54025064486. 2

54025064487. 3

54025064488. 4

Question Number : 203 Question Id : 54025016123 Question Type : MCQ Option Shuffling : No

Is Question Mandatory : No Calculator : None Response Time : N.A Think Time : N.A

Minimum Instruction Time : 0

Correct Marks : 5 Wrong Marks : 1

Question Key Details :

Key	Value
Comprehension	MCQ

Find the 18th and nth term of the A.P. given by :

8, 13, 18, . . .

- (1) 80, $3 + 5n$
- (2) 93, $3 + 5n$
- (3) 65, $3 - 2n$
- (4) 40, $5 + 3n$

Options :

54025064489. 1

54025064490. 2

54025064491. 3

54025064492. 4

Question Number : 203 Question Id : 54025016123 Question Type : MCQ Option Shuffling : No

Is Question Mandatory : No Calculator : None Response Time : N.A Think Time : N.A

Minimum Instruction Time : 0

Correct Marks : 5 Wrong Marks : 1

Question Key Details :

Key	Value
Comprehension	MCQ

दी गई समांतर श्रेणी का 18^{वाँ} और n^{वाँ} पद ज्ञात कीजिए :

8, 13, 18, . . .

(1) 80, $3 + 5n$

(2) 93, $3 + 5n$

(3) 65, $3 - 2n$

(4) 40, $5 + 3n$

Options :

54025064489. 1

54025064490. 2

54025064491. 3

54025064492. 4

Question Number : 204 Question Id : 54025016124 Question Type : MCQ Option Shuffling : No

Is Question Mandatory : No Calculator : None Response Time : N.A Think Time : N.A

Minimum Instruction Time : 0

Correct Marks : 5 Wrong Marks : 1

Question Key Details :

Key	Value
Comprehension	MCQ

If a person travel $10\frac{1}{5}$ Km in 3h, then the distance covered by him in 5 h will be :

- (1) 17 km
- (2) 22 km
- (3) 20 km
- (4) 30 km

Options :

54025064493. 1

54025064494. 2

54025064495. 3

54025064496. 4

Question Number : 204 Question Id : 54025016124 Question Type : MCQ Option Shuffling : No

Is Question Mandatory : No Calculator : None Response Time : N.A Think Time : N.A

Minimum Instruction Time : 0

Correct Marks : 5 Wrong Marks : 1

Question Key Details :

Key	Value
Comprehension	MCQ

यदि कोई व्यक्ति 3 घंटे में $10\frac{1}{5}$ किमी. दूरी तय करता है, तो उसके द्वारा 5 घंटे में कितनी दूरी तय की जाएगी ?

- (1) 17 किमी.
- (2) 22 किमी.
- (3) 20 किमी.
- (4) 30 किमी.

Options :

54025064493. 1

54025064494. 2

54025064495. 3

54025064496. 4

**Question Number : 205 Question Id : 54025016125 Question Type : MCQ Option Shuffling : No
Is Question Mandatory : No Calculator : None Response Time : N.A Think Time : N.A
Minimum Instruction Time : 0**

Correct Marks : 5 Wrong Marks : 1

Question Key Details :

Key	Value
Comprehension	MCQ

Speed of the boat along the current and against the current are 10 km/h and 8 km/h respectively.
What is the speed of the current ?

- (1) 4
- (2) 3
- (3) 2
- (4) 1

Options :

54025064497. 1

54025064498. 2

54025064499. 3

54025064500. 4

**Question Number : 205 Question Id : 54025016125 Question Type : MCQ Option Shuffling : No
Is Question Mandatory : No Calculator : None Response Time : N.A Think Time : N.A
Minimum Instruction Time : 0**

Correct Marks : 5 Wrong Marks : 1

Question Key Details :

Key	Value
Comprehension	MCQ

यदि किसी नौका की गति धारा के अनुकूल तथा धारा के विपरीत क्रमशः 10 किमी./घं. और 8 किमी./घं. है, तो धारा की गति कितनी है?

- (1) 4
- (2) 3
- (3) 2
- (4) 1

Options :

54025064497. 1

54025064498. 2

54025064499. 3

54025064500. 4

Question Number : 206 Question Id : 54025016126 Question Type : MCQ Option Shuffling : No

Is Question Mandatory : No Calculator : None Response Time : N.A Think Time : N.A

Minimum Instruction Time : 0

Correct Marks : 5 Wrong Marks : 1

Question Key Details :

Key	Value
Comprehension	MCQ

Find the co-ordinate of the mid point of a line which joins P(2, -1) and Q(-3, 4) :

(1) $\left(-\frac{1}{2}, \frac{3}{2}\right)$

(2) $\left(\frac{3}{2}, \frac{1}{2}\right)$

(3) $\left(\frac{2}{3}, \frac{3}{2}\right)$

(4) $\left(-\frac{5}{2}, -\frac{1}{2}\right)$

Options :

54025064501. 1

54025064502. 2

54025064503. 3

54025064504. 4

Question Number : 206 Question Id : 54025016126 Question Type : MCQ Option Shuffling : No

Is Question Mandatory : No Calculator : None Response Time : N.A Think Time : N.A

Minimum Instruction Time : 0

Correct Marks : 5 Wrong Marks : 1

Question Key Details :

Key	Value
Comprehension	MCQ

P(2, -1) और Q(-3, 4) बिंदुओं के योग के मध्य बिंदु का निर्देशांक ज्ञात कीजिए :

(1) $\left(-\frac{1}{2}, \frac{3}{2}\right)$

(2) $\left(\frac{3}{2}, \frac{1}{2}\right)$

(3) $\left(\frac{2}{3}, \frac{3}{2}\right)$

(4) $\left(-\frac{5}{2}, -\frac{1}{2}\right)$

Options :

54025064501. 1

54025064502. 2

54025064503. 3

54025064504. 4

Question Number : 207 Question Id : 54025016127 Question Type : MCQ Option Shuffling : No

Is Question Mandatory : No Calculator : None Response Time : N.A Think Time : N.A

Minimum Instruction Time : 0

Correct Marks : 5 Wrong Marks : 1

Question Key Details :

Key	Value
Comprehension	MCQ

How many 3-letter words can be formed from the letters of the word 'OBJECTS' if repetition is not allowed ?

- (1) 35
- (2) 120
- (3) 210
- (4) 840

Options :

54025064505. 1

54025064506. 2

54025064507. 3

54025064508. 4

Question Number : 207 Question Id : 54025016127 Question Type : MCQ Option Shuffling : No

Is Question Mandatory : No Calculator : None Response Time : N.A Think Time : N.A

Minimum Instruction Time : 0

Correct Marks : 5 Wrong Marks : 1

Question Key Details :

Key	Value
Comprehension	MCQ

यदि पुनरावृत्ति की अनुमति न हो, तो 'OBJECTS' शब्द के अक्षरों से 3 - अक्षर के कितने शब्द बनाये जा सकते हैं?

- (1) 35
- (2) 120
- (3) 210
- (4) 840

Options :

54025064505. 1

54025064506. 2

54025064507. 3

54025064508. 4

Question Number : 208 Question Id : 54025016128 Question Type : MCQ Option Shuffling : No

Is Question Mandatory : No Calculator : None Response Time : N.A Think Time : N.A

Minimum Instruction Time : 0

Correct Marks : 5 Wrong Marks : 1

Question Key Details :

Key	Value
Comprehension	MCQ

How many chords can be drawn through 5 points on a circle ?

- (1) 5
- (2) 10
- (3) 20
- (4) 60

Options :

54025064509. 1

54025064510. 2

54025064511. 3

54025064512. 4

Question Number : 208 Question Id : 54025016128 Question Type : MCQ Option Shuffling : No

Is Question Mandatory : No Calculator : None Response Time : N.A Think Time : N.A

Minimum Instruction Time : 0

Correct Marks : 5 Wrong Marks : 1

Question Key Details :

Key	Value
Comprehension	MCQ

किसी वृत्त पर 5 बिंदुओं द्वारा कितने चाप कर्ण खींचे जा सकते हैं?

- (1) 5
- (2) 10
- (3) 20
- (4) 60

Options :

54025064509. 1

54025064510. 2

54025064511. 3

54025064512. 4

Question Number : 209 Question Id : 54025016129 Question Type : MCQ Option Shuffling : No

Is Question Mandatory : No Calculator : None Response Time : N.A Think Time : N.A

Minimum Instruction Time : 0

Correct Marks : 5 Wrong Marks : 1

Question Key Details :

Key	Value
Comprehension	MCQ

Two pipes A and B can fill a tank in 10 h and 15 h Respectively. Find the time taken to fill the tank when both the pipes are turned on simultaneously :

- (1) 5 h
- (2) 6 h
- (3) 8 h
- (4) 12 h

Options :

54025064513. 1

54025064514. 2

54025064515. 3

54025064516. 4

Question Number : 209 Question Id : 54025016129 Question Type : MCQ Option Shuffling : No

Is Question Mandatory : No Calculator : None Response Time : N.A Think Time : N.A

Minimum Instruction Time : 0

Correct Marks : 5 Wrong Marks : 1

Question Key Details :

Key	Value
Comprehension	MCQ

यदि A और B दो पाइपें किसी टंकी को क्रमशः 10 घंटे और 15 घंटे में भर सकती हैं। जब दोनों पाइपों को एक साथ खोल दिया जाय तो टंकी भरने में कितना समय लगेगा ?

- (1) 5 घंटे
- (2) 6 घंटे
- (3) 8 घंटे
- (4) 12 घंटे

Options :

54025064513. 1

54025064514. 2

54025064515. 3

54025064516. 4

Question Number : 210 Question Id : 54025016130 Question Type : MCQ Option Shuffling : No

Is Question Mandatory : No Calculator : None Response Time : N.A Think Time : N.A

Minimum Instruction Time : 0

Correct Marks : 5 Wrong Marks : 1

Question Key Details :

Key	Value
Comprehension	MCQ

At what rate of interest ₹ 1,200 becomes ₹ 1,323 in 2 years where interest gets compounded annually :

(1) $2\frac{1}{2}\%$

(2) $3\frac{1}{4}\%$

(3) 5%

(4) $7\frac{1}{2}\%$

Options :

54025064517. 1

54025064518. 2

54025064519. 3

54025064520. 4

Question Number : 210 Question Id : 54025016130 Question Type : MCQ Option Shuffling : No

Is Question Mandatory : No Calculator : None Response Time : N.A Think Time : N.A

Minimum Instruction Time : 0

Correct Marks : 5 Wrong Marks : 1

Question Key Details :

Key	Value
Comprehension	MCQ

किसी ब्याज दर पर ₹ 1,200 दो वर्षों में ₹ 1,323 हो जाता है, जबकि ब्याज वार्षिक रूप से संयोजित किया जाता है?

(1) $2\frac{1}{2}\%$

(2) $3\frac{1}{4}\%$

(3) 5%

(4) $7\frac{1}{2}\%$

Options :

54025064517. 1

54025064518. 2

54025064519. 3

54025064520. 4

Question Number : 211 Question Id : 54025016131 Question Type : MCQ Option Shuffling : No**Is Question Mandatory : No Calculator : None Response Time : N.A Think Time : N.A****Minimum Instruction Time : 0****Correct Marks : 5 Wrong Marks : 1****Question Key Details :**

Key	Value
Comprehension	MCQ

Arun invests an amount of ₹ 4,000 at the rate of 2% simple interest per annum. For how many years did he invest the amount to double his sum ?

- (1) 20 years
- (2) 30 years
- (3) 50 years
- (4) 45 years

Options :

54025064521. 1

54025064522. 2

54025064523. 3

54025064524. 4

Question Number : 211 Question Id : 54025016131 Question Type : MCQ Option Shuffling : No**Is Question Mandatory : No Calculator : None Response Time : N.A Think Time : N.A****Minimum Instruction Time : 0****Correct Marks : 5 Wrong Marks : 1****Question Key Details :**

Key	Value
-----	-------

अरुण 2% प्रतिवर्ष साधारण ब्याज की दर से ₹ 4,000 धनराशि का निवेश करता है। उसके द्वारा निवेश की गई धनराशि कितने वर्षों में दुगुनी हो जायेगी ?

- (1) 20 वर्ष
- (2) 30 वर्ष
- (3) 50 वर्ष
- (4) 45 वर्ष

Options :

54025064521. 1

54025064522. 2

54025064523. 3

54025064524. 4

Question Number : 212 Question Id : 54025016132 Question Type : MCQ Option Shuffling : No

Is Question Mandatory : No Calculator : None Response Time : N.A Think Time : N.A

Minimum Instruction Time : 0

Correct Marks : 5 Wrong Marks : 1

Question Key Details :

Key	Value
Comprehension	MCQ

What should replace the question mark ?

$$\frac{854 \times 854 \times 854 - 276 \times 276 \times 276}{854 \times 854 + 854 \times 276 + 276 \times 276} = ?$$

- (1) 1130
- (2) 578
- (3) 565
- (4) 1156

Options :

54025064525. 1

54025064526. 2

54025064527. 3

54025064528. 4

Question Number : 212 Question Id : 54025016132 Question Type : MCQ Option Shuffling : No

Is Question Mandatory : No Calculator : None Response Time : N.A Think Time : N.A

Minimum Instruction Time : 0

Correct Marks : 5 Wrong Marks : 1

Question Key Details :

Key	Value
Comprehension	MCQ

$$\frac{854 \times 854 \times 854 - 276 \times 276 \times 276}{854 \times 854 + 854 \times 276 + 276 \times 276} = ?$$

निम्नलिखित में से कौन-सी संख्या प्रश्नवाचक चिन्ह (?) को प्रतिस्थापित करेगी ?

- (1) 1130
- (2) 578
- (3) 565
- (4) 1156

Options :

54025064525. 1

54025064526. 2

54025064527. 3

54025064528. 4

Question Number : 213 Question Id : 54025016133 Question Type : MCQ Option Shuffling : No

Is Question Mandatory : No Calculator : None Response Time : N.A Think Time : N.A

Minimum Instruction Time : 0

Correct Marks : 5 Wrong Marks : 1

Question Key Details :

Key	Value
Comprehension	MCQ

What is the maximum area of a rectangle which can be inscribed in a circle of radius 2 cm ?

- (1) $2\sqrt{2}$ cm²
- (2) 8 cm²
- (3) $4\sqrt{2}$ cm²
- (4) 4 cm²

Options :

54025064529. 1

54025064530. 2

54025064531. 3

54025064532. 4

Question Number : 213 Question Id : 54025016133 Question Type : MCQ Option Shuffling : No

Is Question Mandatory : No Calculator : None Response Time : N.A Think Time : N.A

Minimum Instruction Time : 0

Correct Marks : 5 Wrong Marks : 1

Question Key Details :

Key	Value
Comprehension	MCQ

2 सेंमी. त्रिज्या के किसी वृत्त में उत्कीर्ण आयत का अधिकतम क्षेत्रफल कितना होगा ?

- (1) $2\sqrt{2}$ सेंमी²
- (2) 8 सेंमी²
- (3) $4\sqrt{2}$ सेंमी²
- (4) 4 सेंमी²

Options :

54025064529. 1

54025064530. 2

54025064531. 3

54025064532. 4

Question Number : 214 Question Id : 54025016134 Question Type : MCQ Option Shuffling : No

Is Question Mandatory : No Calculator : None Response Time : N.A Think Time : N.A

Minimum Instruction Time : 0

Correct Marks : 5 Wrong Marks : 1

Question Key Details :

Key	Value
Comprehension	MCQ

The diameter of the driving wheel of a bus is 140 m. How many revolutions per minute must the wheel make in order to keep a speed of 66 km/h ?

- (1) 1100
- (2) 500
- (3) 250
- (4) 300

Options :

54025064533. 1

54025064534. 2

54025064535. 3

54025064536. 4

Question Number : 214 Question Id : 54025016134 Question Type : MCQ Option Shuffling : No

Is Question Mandatory : No Calculator : None Response Time : N.A Think Time : N.A

Minimum Instruction Time : 0

Correct Marks : 5 Wrong Marks : 1

Question Key Details :

Key	Value
Comprehension	MCQ

किसी बस के चालक चक्र के पहिए का व्यास 140 मी है। 66 किमी/घंटे की गति बनाये रखने के लिए पहिये को प्रति मिनट कितना घूर्णन करना होगा?

- (1) 1100
- (2) 500
- (3) 250
- (4) 300

Options :

54025064533. 1

54025064534. 2

54025064535. 3

54025064536. 4

Question Number : 215 Question Id : 54025016135 Question Type : MCQ Option Shuffling : No

Is Question Mandatory : No Calculator : None Response Time : N.A Think Time : N.A

Minimum Instruction Time : 0

Correct Marks : 5 Wrong Marks : 1

Question Key Details :

Key	Value
Comprehension	MCQ

If the selling price is doubled, the profit triples. Find the profit % :

- (1) 50%
- (2) $105\frac{1}{3}\%$
- (3) $66\frac{2}{3}\%$
- (4) 100%

Options :

54025064537. 1

54025064538. 2

54025064539. 3

54025064540. 4

Question Number : 215 Question Id : 54025016135 Question Type : MCQ Option Shuffling : No

Is Question Mandatory : No Calculator : None Response Time : N.A Think Time : N.A

Minimum Instruction Time : 0

Correct Marks : 5 Wrong Marks : 1

Question Key Details :

Key	Value
Comprehension	MCQ

यदि विक्रय मूल्य दुगुना कर दिया जाता है, लाभ तिगुना हो जाता है, तो लाभ % ज्ञात कीजिए?

(1) 50%

(2) $105\frac{1}{3}\%$

(3) $66\frac{2}{3}\%$

(4) 100%

Options :

54025064537. 1

54025064538. 2

54025064539. 3

54025064540. 4

Question Number : 216 Question Id : 54025016136 Question Type : MCQ Option Shuffling : No

Is Question Mandatory : No Calculator : None Response Time : N.A Think Time : N.A

Minimum Instruction Time : 0

Correct Marks : 5 Wrong Marks : 1

Question Key Details :

Key	Value
Comprehension	MCQ

Arjun is twice as old as Shreya. Five years ago, his age was three times Shreya's age. Find the sum of their present ages :

- (1) 20 years
- (2) 30 years
- (3) 40 years
- (4) 50 years

Options :

54025064541. 1

54025064542. 2

54025064543. 3

54025064544. 4

Question Number : 216 Question Id : 54025016136 Question Type : MCQ Option Shuffling : No

Is Question Mandatory : No Calculator : None Response Time : N.A Think Time : N.A

Minimum Instruction Time : 0

Correct Marks : 5 Wrong Marks : 1

Question Key Details :

Key	Value
Comprehension	MCQ

अर्जुन की आयु श्रेया की आयु की दुगुनी है। पाँच वर्ष पूर्व उसकी आयु श्रेया की आयु की तीन गुनी थी। उनकी वर्तमान आयु का योग ज्ञात कीजिए?

- (1) 20 वर्ष
- (2) 30 वर्ष
- (3) 40 वर्ष
- (4) 50 वर्ष

Options :

54025064541. 1

54025064542. 2

54025064543. 3

54025064544. 4

Question Number : 217 Question Id : 54025016137 Question Type : MCQ Option Shuffling : No Is Question Mandatory : No Calculator : None Response Time : N.A Think Time : N.A Minimum Instruction Time : 0

Correct Marks : 5 Wrong Marks : 1

Question Key Details :

Key	Value
Comprehension	MCQ

A bag contains 6 white and 4 black ball. Two balls are drawn at random. Then the probability of getting balls of the same colour is _____.

(1) $\frac{8}{15}$

(2) $\frac{6}{15}$

(3) $\frac{6}{13}$

(4) $\frac{7}{15}$

Options :

54025064545. 1

54025064546. 2

54025064547. 3

54025064548. 4

Question Number : 217 Question Id : 54025016137 Question Type : MCQ Option Shuffling : No Is Question Mandatory : No Calculator : None Response Time : N.A Think Time : N.A Minimum Instruction Time : 0

Correct Marks : 5 Wrong Marks : 1

Question Key Details :

Key	Value
-----	-------

एक बैग में 6 सफेद और 4 काली गेंद हैं। यादृच्छिक रूप से दो गेंद निकाली जाती हैं तो एक ही रंग की गेंद प्राप्त होने की संभाव्यता _____ है।

(1) $\frac{8}{15}$

(2) $\frac{6}{15}$

(3) $\frac{6}{13}$

(4) $\frac{7}{15}$

Options :

54025064545. 1

54025064546. 2

54025064547. 3

54025064548. 4

Question Number : 218 Question Id : 54025016138 Question Type : MCQ Option Shuffling : No

Is Question Mandatory : No Calculator : None Response Time : N.A Think Time : N.A

Minimum Instruction Time : 0

Correct Marks : 5 Wrong Marks : 1

Question Key Details :

Key	Value
Comprehension	MCQ

A die is thrown. Find the probability of getting :

(A) A number greater than 6 and

(B) A number less than 3.

(1) $0, \frac{1}{3}$

(2) $1, \frac{1}{2}$

(3) $\frac{1}{2}, 0$

(4) $\frac{1}{2}, \frac{1}{3}$

Options :

54025064549. 1

54025064550. 2

54025064551. 3

54025064552. 4

Question Number : 218 Question Id : 54025016138 Question Type : MCQ Option Shuffling : No

Is Question Mandatory : No Calculator : None Response Time : N.A Think Time : N.A

Minimum Instruction Time : 0

Correct Marks : 5 Wrong Marks : 1

Question Key Details :

Key	Value
Comprehension	MCQ

एक पासा फेंका जाता है। निम्नलिखित के प्राप्त होने की संभाव्यता ज्ञात कीजिए :

(A) 6 से अधिक संख्या और

(B) 3 से कम संख्या

(1) $0, \frac{1}{3}$

(2) $1, \frac{1}{2}$

(3) $\frac{1}{2}, 0$

(4) $\frac{1}{2}, \frac{1}{3}$

Options :

54025064549. 1

54025064550. 2

54025064551. 3

54025064552. 4

Question Number : 219 Question Id : 54025016139 Question Type : MCQ Option Shuffling : No

Is Question Mandatory : No Calculator : None Response Time : N.A Think Time : N.A

Minimum Instruction Time : 0

Correct Marks : 5 Wrong Marks : 1

Question Key Details :

Key	Value
Comprehension	MCQ

A man spends 60% of his income and saves the remaining. His income increases by 28% and his expenditure also increases by 30%. Find the percentage increase in his savings.

(1) 4%

(2) 4.44%

(3) 30%

(4) No change

Options :

54025064553. 1

54025064554. 2

54025064555. 3

54025064556. 4

Question Number : 219 Question Id : 54025016139 Question Type : MCQ Option Shuffling : No**Is Question Mandatory : No Calculator : None Response Time : N.A Think Time : N.A****Minimum Instruction Time : 0****Correct Marks : 5 Wrong Marks : 1****Question Key Details :**

Key	Value
Comprehension	MCQ

एक व्यक्ति अपनी आय का 60% व्यय करता है तथा शेष बचत करता है। उसकी आय में 28% की वृद्धि हो जाती है तथा उसके व्यय में भी 30% की वृद्धि हो जाती है। उसकी बचत में वृद्धि का प्रतिशत ज्ञात कीजिए?

- (1) 4%
- (2) 4.44%
- (3) 30%
- (4) कोई परिवर्तन नहीं

Options :

54025064553. 1

54025064554. 2

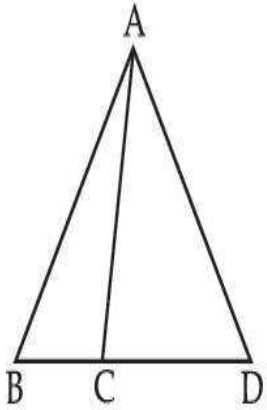
54025064555. 3

54025064556. 4

Question Number : 220 Question Id : 54025016140 Question Type : MCQ Option Shuffling : No**Is Question Mandatory : No Calculator : None Response Time : N.A Think Time : N.A****Minimum Instruction Time : 0****Correct Marks : 5 Wrong Marks : 1****Question Key Details :**

Key	Value
Comprehension	MCQ

In the given figure, $AB = AD$. $\angle ACB = 95^\circ + \angle BAC$ and $\angle BAD = 150^\circ$. Find $\angle ACB$.



- (1) 100°
- (2) 110°
- (3) 120°
- (4) 130°

Options :

54025064557. 1

54025064558. 2

54025064559. 3

54025064560. 4

Question Number : 220 Question Id : 54025016140 Question Type : MCQ Option Shuffling : No

Is Question Mandatory : No Calculator : None Response Time : N.A Think Time : N.A

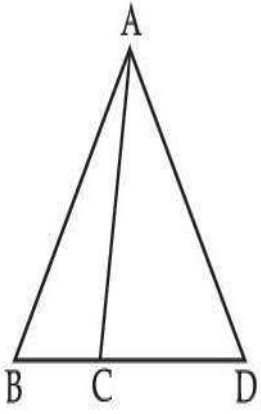
Minimum Instruction Time : 0

Correct Marks : 5 Wrong Marks : 1

Question Key Details :

Key	Value
Comprehension	MCQ

दी गई आकृति में, $AB = AD$ है। $\angle ACB = 95^\circ + \angle BAC$ तथा $\angle BAD = 150^\circ$ है। $\angle ACB$ ज्ञात कीजिए।



- (1) 100°
- (2) 110°
- (3) 120°
- (4) 130°

Options :

54025064557. 1

54025064558. 2

54025064559. 3

54025064560. 4

Question Number : 221 Question Id : 54025016141 Question Type : MCQ Option Shuffling : No

Is Question Mandatory : No Calculator : None Response Time : N.A Think Time : N.A

Minimum Instruction Time : 0

Correct Marks : 5 Wrong Marks : 1

Question Key Details :

Key	Value
Comprehension	MCQ

At what angle the hands of a clock are inclined at 16 minutes past 4 ?

- (1) 56°
- (2) 46°
- (3) 32°
- (4) 60°

Options :

54025064561. 1

54025064562. 2

54025064563. 3

54025064564. 4

Question Number : 221 Question Id : 54025016141 Question Type : MCQ Option Shuffling : No**Is Question Mandatory : No Calculator : None Response Time : N.A Think Time : N.A****Minimum Instruction Time : 0****Correct Marks : 5 Wrong Marks : 1****Question Key Details :**

Key	Value
Comprehension	MCQ

घड़ी की सूई 4 बजकर 16 मिनट पर किस कोण पर अभिनत होगी ?

(1) 56° (2) 46° (3) 32° (4) 60° **Options :**

54025064561. 1

54025064562. 2


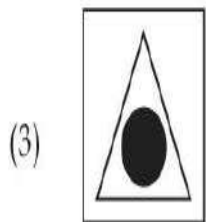
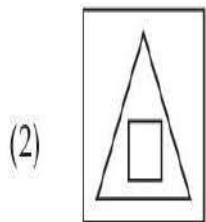
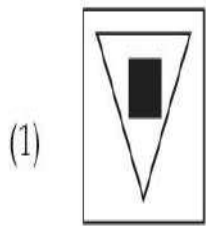
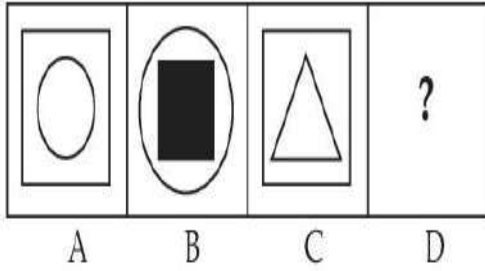
54025064563. 3

54025064564. 4

Question Number : 222 Question Id : 54025016142 Question Type : MCQ Option Shuffling : No**Is Question Mandatory : No Calculator : None Response Time : N.A Think Time : N.A****Minimum Instruction Time : 0****Correct Marks : 5 Wrong Marks : 1****Question Key Details :**

Key	Value
-----	-------

There is a definite relationship between figures A and B. Establish a similar relationship between figures C and D by selecting a suitable figure from options :



Options :

54025064565. 1

54025064566. 2

54025064567. 3

54025064568. 4

Is Question Mandatory : No Calculator : None Response Time : N.A Think Time : N.A


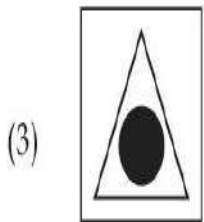
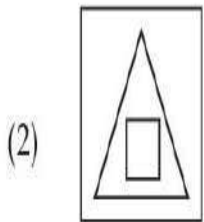
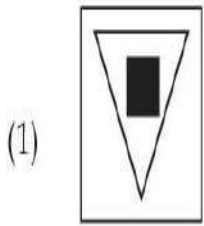
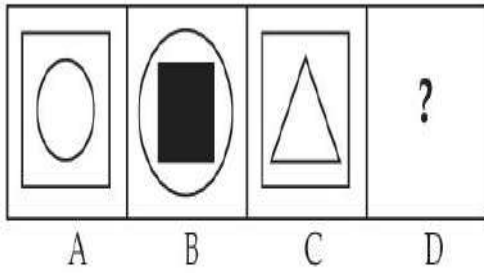
Minimum Instruction Time : 0

Correct Marks : 5 Wrong Marks : 1

Question Key Details :

Key	Value
Comprehension	MCQ

आकृति A और B के बीच एक निश्चित संबंध है। विकल्पों में से उपयुक्त आकृति के चयन द्वारा आकृति C और D के बीच समान संबंध स्थापित कीजिए :



Options :

54025064565. 1

54025064566. 2

54025064567. 3

54025064568. 4

Question Number : 223 Question Id : 54025016143 Question Type : MCQ Option Shuffling : No

Is Question Mandatory : No Calculator : None Response Time : N.A Think Time : N.A

Minimum Instruction Time : 0

Correct Marks : 5 Wrong Marks : 1

Question Key Details :

Key	Value
Comprehension	MCQ

Five persons are standing in a queue, one of two persons at the extreme end is a doctor and the other is engineer. An advocate is standing to the right of the student. An Author is to the left of the engineer. The student is standing between the doctor and advocate.

If the advocate and engineer exchange their positions and also the author and the student, then who will be standing to the left of the author ?

- (1) Doctor
- (2) Engineer
- (3) Advocate
- (4) Student

Options :

54025064569. 1

54025064570. 2

54025064571. 3

54025064572. 4

Question Number : 223 Question Id : 54025016143 Question Type : MCQ Option Shuffling : No

Is Question Mandatory : No Calculator : None Response Time : N.A Think Time : N.A

Minimum Instruction Time : 0

Correct Marks : 5 Wrong Marks : 1

Question Key Details :

Key	Value
Comprehension	MCQ

पाँच व्यक्ति एक पंक्ति में खड़े हैं। अंतिम छोर पर खड़े दो व्यक्तियों में से एक डॉक्टर है तथा दूसरा इंजीनियर है। विद्यार्थी के दाहिनी ओर एक वकील खड़ा है। इंजीनियर के बायीं ओर लेखक है। डॉक्टर और वकील के बीच में विद्यार्थी खड़ा है।

यदि वकील और इंजीनियर आपस में अपना स्थान परिवर्तित कर लेते हैं तथा लेखक और विद्यार्थी भी अपना स्थान परिवर्तित कर लेते हैं, तो लेखक के बायीं तरफ खड़ा व्यक्ति कौन होगा?

- (1) डॉक्टर
- (2) इंजीनियर
- (3) वकील
- (4) विद्यार्थी

Options :

54025064569. 1

54025064570. 2

54025064571. 3

54025064572. 4

Question Number : 224 Question Id : 54025016144 Question Type : MCQ Option Shuffling : No**Is Question Mandatory : No Calculator : None Response Time : N.A Think Time : N.A****Minimum Instruction Time : 0****Correct Marks : 5 Wrong Marks : 1****Question Key Details :**

Key	Value
Comprehension	MCQ

A is the husband of B. C is the only grandson of D who is wife of E and mother-in-law of B. How is A related to E ?

- (1) Cousin
- (2) Nephew
- (3) Son-in-law
- (4) Son

Options :

54025064573. 1

54025064574. 2

54025064575. 3

54025064576. 4

Question Number : 224 Question Id : 54025016144 Question Type : MCQ Option Shuffling : No**Is Question Mandatory : No Calculator : None Response Time : N.A Think Time : N.A****Minimum Instruction Time : 0****Correct Marks : 5 Wrong Marks : 1****Question Key Details :**

Key	Value
Comprehension	MCQ

A B का पति है। E की पत्नी और B की सास D का एकमात्र नाती C है। A, E से कैसे संबंधित है?

- (1) चचेरा भाई
- (2) भतीजा
- (3) दामाद
- (4) पुत्र

Options :

54025064573. 1

54025064574. 2

54025064575. 3

54025064576. 4

Question Number : 225 Question Id : 54025016145 Question Type : MCQ Option Shuffling : No**Is Question Mandatory : No Calculator : None Response Time : N.A Think Time : N.A****Minimum Instruction Time : 0****Correct Marks : 5 Wrong Marks : 1****Question Key Details :**

Key	Value
Comprehension	MCQ

Shyam walks 4 km north-east and then 3 km south-east. Find the total distance as well as the shortest distance between starting and end point.

- (1) 14, 7
- (2) 9, 5
- (3) 7, 5
- (4) 8, 5

Options :

54025064577. 1

54025064578. 2

54025064579. 3

54025064580. 4

Question Number : 225 Question Id : 54025016145 Question Type : MCQ Option Shuffling : No

Is Question Mandatory : No Calculator : None Response Time : N.A Think Time : N.A

Minimum Instruction Time : 0

Correct Marks : 5 Wrong Marks : 1

Question Key Details :

Key	Value
Comprehension	MCQ

श्याम 4 किमी. उत्तर-पूर्व चलता है और फिर 3 किमी. दक्षिण-पूर्व चलता है। आरंभिक बिंदु और अंतिम बिंदु के बीच कुल दूरी के साथ-साथ न्यूनतम दूरी ज्ञात कीजिए।

- (1) 14, 7
- (2) 9, 5
- (3) 7, 5
- (4) 8, 5

Options :

54025064577. 1

54025064578. 2

54025064579. 3

54025064580. 4

**Question Number : 226 Question Id : 54025016146 Question Type : MCQ Option Shuffling : No
Is Question Mandatory : No Calculator : None Response Time : N.A Think Time : N.A**

Minimum Instruction Time : 0

Correct Marks : 5 Wrong Marks : 1

Question Key Details :

Key	Value
Comprehension	MCQ

When a calendar of year 1997 can be used again ?

- (1) 2001
- (2) 2005
- (3) 2003
- (4) 2007

Options :

54025064581. 1

54025064582. 2

54025064583. 3

54025064584. 4

**Question Number : 226 Question Id : 54025016146 Question Type : MCQ Option Shuffling : No
Is Question Mandatory : No Calculator : None Response Time : N.A Think Time : N.A**

Minimum Instruction Time : 0

Correct Marks : 5 Wrong Marks : 1

Question Key Details :

Key	Value
Comprehension	MCQ

वर्ष 1997 का कैलेण्डर पुनः किस वर्ष प्रयुक्त किया जा सकता है?

- (1) 2001
- (2) 2005
- (3) 2003
- (4) 2007

Options :

54025064581. 1

54025064582. 2

54025064583. 3

54025064584. 4

Question Number : 227 Question Id : 54025016147 Question Type : MCQ Option Shuffling : No

Is Question Mandatory : No Calculator : None Response Time : N.A Think Time : N.A

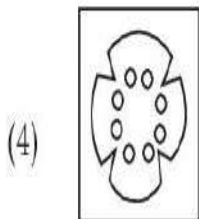
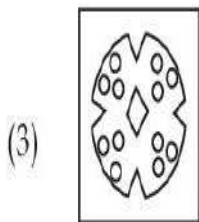
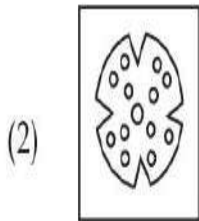
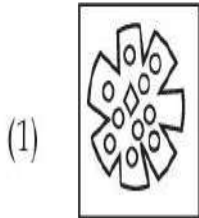
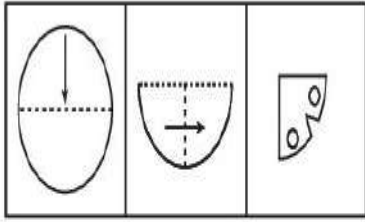
Minimum Instruction Time : 0

Correct Marks : 5 Wrong Marks : 1

Question Key Details :

Key	Value
Comprehension	MCQ

A piece of paper is folded and cut as shown below. From the given figures, indicate how it will appear when it is opened ?



Options :

54025064585. 1

54025064586. 2

54025064587. 3

54025064588. 4

Question Number : 227 Question Id : 54025016147 Question Type : MCQ Option Shuffling : No

Is Question Mandatory : No Calculator : None Response Time : N.A Think Time : N.A

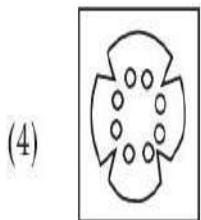
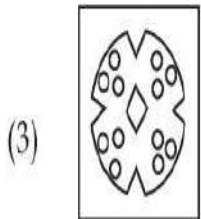
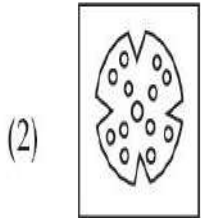
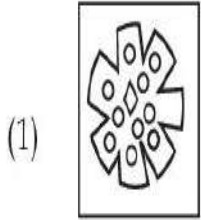
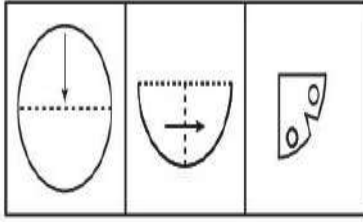
Minimum Instruction Time : 0

Correct Marks : 5 Wrong Marks : 1

Question Key Details :

Key	Value
Comprehension	MCQ

कागज के एक टुकड़े को नीचे प्रदर्शित चित्र के अनुसार मोड़ा तथा काटा जाता है। नीचे दी गई आकृतियों से इंगित कीजिए कि जब इसे खोला जायेगा तो कैसे दिखाई देगा?



Options :

54025064585. 1

54025064586. 2

54025064587. 3

54025064588. 4

Question Number : 228 Question Id : 54025016148 Question Type : MCQ Option Shuffling : No

Is Question Mandatory : No Calculator : None Response Time : N.A Think Time : N.A

Minimum Instruction Time : 0

Correct Marks : 5 Wrong Marks : 1

Question Key Details :

Key	Value
Comprehension	MCQ

Seven friends A, B, C, D, E, F and G are sitting in a circle facing the centre. A is between E and D.
F is between B and G. B is second to the right of E.

G is sitting :

- (1) between A and F
- (2) to the immediate right of F
- (3) second to the left of A
- (4) fourth to the left of E

Options :

54025064589. 1

54025064590. 2

54025064591. 3

54025064592. 4

Question Number : 228 Question Id : 54025016148 Question Type : MCQ Option Shuffling : No

Is Question Mandatory : No Calculator : None Response Time : N.A Think Time : N.A

Minimum Instruction Time : 0

Correct Marks : 5 Wrong Marks : 1

Question Key Details :

Key	Value
Comprehension	MCQ

सात मित्र A, B, C, D, E, F और G केन्द्र की ओर मुँह करके एक वृत्त में बैठे हैं। A, E और D के बीच में है। E, B और G के बीच में है। E के दाहिनी ओर से दूसरे स्थान पर B है।

G कहाँ बैठा है :

- (1) A और F के बीच
- (2) F के तुरंत दाहिने
- (3) A के बायें से दूसरे स्थान पर
- (4) E के बायें से चौथे स्थान पर

Options :

54025064589. 1

54025064590. 2

54025064591. 3

54025064592. 4

Question Number : 229 Question Id : 54025016149 Question Type : MCQ Option Shuffling : No

Is Question Mandatory : No Calculator : None Response Time : N.A Think Time : N.A

Minimum Instruction Time : 0

Correct Marks : 5 Wrong Marks : 1

Question Key Details :

Key	Value
Comprehension	MCQ

Six lectures are scheduled in a week starting from Monday and ending on Sunday with one off day in between. Computer science is not on Tuesday or Saturday. Psychology is immediately after organisational behaviour. Statistics is not on Friday and there is one day gap between statistics and Research methods. One day prior to the schedule of Economics there is no lecture (as that day is the off day and Monday is not the off day)

On which day is computer science scheduled ?

- (1) Friday
- (2) Thursday
- (3) Sunday
- (4) Wednesday

Options :

54025064593. 1

54025064594. 2

54025064595. 3

54025064596. 4

Question Number : 229 Question Id : 54025016149 Question Type : MCQ Option Shuffling : No

Is Question Mandatory : No Calculator : None Response Time : N.A Think Time : N.A

Minimum Instruction Time : 0

Correct Marks : 5 Wrong Marks : 1

Question Key Details :

Key	Value
Comprehension	MCQ

सोमवार से प्रारंभ किसी सप्ताह में छह व्याख्यान निर्धारित हैं तथा उसी सप्ताह के रविवार को समाप्त होते हैं। कंप्यूटर साइंस मंगलवार या शनिवार को नहीं है। मनोविज्ञान सांगठनिक व्यवहार के तुरंत बाद है। सांख्यिकी शुक्रवार को नहीं है तथा सांख्यिकी और अनुसंधान प्रविधि के बीच एक दिन का अंतराल है। अर्थशास्त्र के नियत समय के एक दिन पूर्व कोई व्याख्यान नहीं है (क्योंकि वह दिन 'अवकाश' का दिन है तथा सोमवार 'अवकाश' का दिन नहीं है)

कंप्यूटर साइंस के लिए नियत दिन कौन-सा है?

- (1) शुक्रवार
- (2) गुरुवार
- (3) रविवार
- (4) बुधवार

Options :

54025064593. 1

54025064594. 2

54025064595. 3

54025064596. 4

Question Number : 230 Question Id : 54025016150 Question Type : MCQ Option Shuffling : No

Is Question Mandatory : No Calculator : None Response Time : N.A Think Time : N.A

Minimum Instruction Time : 0

Correct Marks : 5 Wrong Marks : 1

Question Key Details :

Key	Value
Comprehension	MCQ

Answer the following question by using Venn diagram on the basis of the given statements and conclusions. You have to assume all the statements there, decide which of the given conclusions logically follows from the information given in the statements

Statements : I. Some shirts are pants.
II. All shoes are shirts.
III. All pants are gloves.

Conclusions : I. Some shoes are gloves.
II. Some shirts are gloves.
III. No pants are shoes.
IV. All gloves are shirts.

- (1) Only II follows
- (2) Only IV follows
- (3) Only I and II follows
- (4) Only I and IV follows

Options :

54025064597. 1

54025064598. 2

54025064599. 3

54025064600. 4

Question Number : 230 Question Id : 54025016150 Question Type : MCQ Option Shuffling : No

Is Question Mandatory : No Calculator : None Response Time : N.A Think Time : N.A

Minimum Instruction Time : 0

Correct Marks : 5 Wrong Marks : 1

Question Key Details :

Key	Value
Comprehension	MCQ

दिय गये कथनों और निष्कर्षों के आधार पर वेन आरेख का प्रयोग करते हुए निम्नलिखित प्रश्न का उत्तर दीजिए। आपको यह मानना है कि सभी कथन सत्य हैं तथा आपको यह निश्चित करना है कि दिये गये कौन-से निष्कर्ष में कथन में प्रदत्त सूचना का अनुपालन होता है।

- कथन :**
- I. कुछ शर्ट पैन्ट हैं।
 - II. सभी जूते शर्ट हैं।
 - III. सभी पैन्ट दस्ताने हैं।

- निष्कर्ष :**
- I. कुछ जूते दस्ताने हैं।
 - II. कुछ शर्ट दस्ताने हैं।
 - III. कोई भी पैन्ट जूते नहीं है।
 - IV. सभी दस्ताने शर्ट हैं।

- (1) केवल II का अनुपालन होता है
- (2) केवल IV का अनुपालन होता है
- (3) केवल I और II का अनुपालन होता है
- (4) केवल I और IV का अनुपालन होता है

Options :

54025064597. 1
54025064598. 2
54025064599. 3
54025064600. 4

Question Number : 231 Question Id : 54025016151 Question Type : MCQ Option Shuffling : No

Is Question Mandatory : No Calculator : None Response Time : N.A Think Time : N.A

Minimum Instruction Time : 0

Correct Marks : 5 Wrong Marks : 1

Question Key Details :

Key	Value
Comprehension	MCQ

Find the next term in the given series.

BMO, EOQ, HQS, _____.

- (1) UKS
- (2) PQS
- (3) KSU
- (4) RSK

Options :

54025064601. 1

54025064602. 2

54025064603. 3

54025064604. 4

Question Number : 231 Question Id : 54025016151 Question Type : MCQ Option Shuffling : No

Is Question Mandatory : No Calculator : None Response Time : N.A Think Time : N.A

Minimum Instruction Time : 0

Correct Marks : 5 Wrong Marks : 1

Question Key Details :

Key	Value
Comprehension	MCQ

शृंखला में अगला पद ज्ञात कीजिए :

BMO, EOQ, HQS, _____.

- (1) UKS
- (2) PQS
- (3) KSU
- (4) RSK

Options :

54025064601. 1

54025064602. 2

54025064603. 3

54025064604. 4

Question Number : 232 Question Id : 54025016152 Question Type : MCQ Option Shuffling : No

Is Question Mandatory : No Calculator : None Response Time : N.A Think Time : N.A

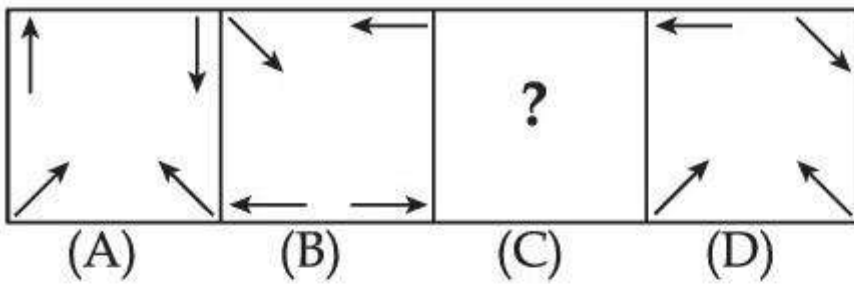
Minimum Instruction Time : 0

Correct Marks : 5 Wrong Marks : 1

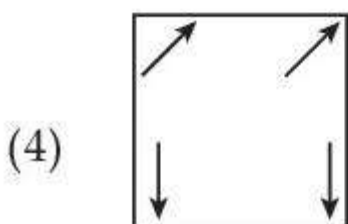
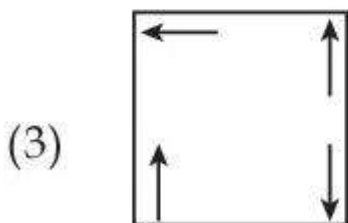
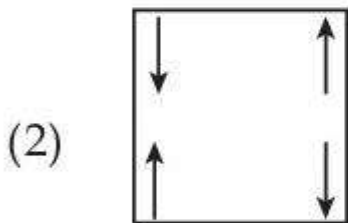
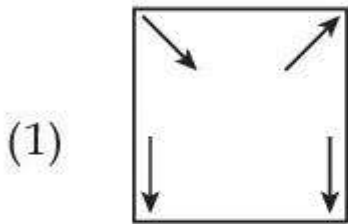
Question Key Details :

Key	Value
Comprehension	MCQ

Problem figure :



Choose the **correct** option to complete the series :



Options :

54025064605. 1

54025064606. 2

54025064607. 3

54025064608. 4

Question Number : 232 Question Id : 54025016152 Question Type : MCQ Option Shuffling : No

Is Question Mandatory : No Calculator : None Response Time : N.A Think Time : N.A

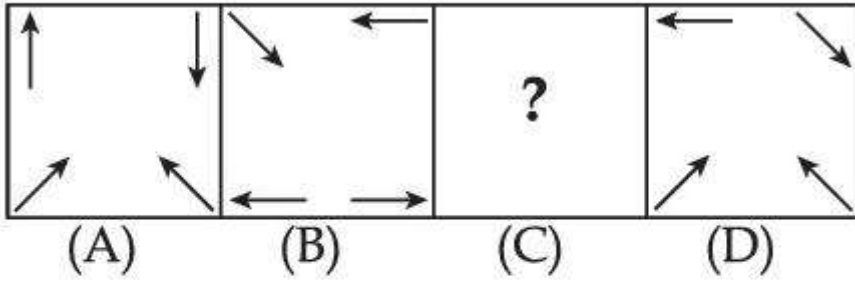
Minimum Instruction Time : 0

Correct Marks : 5 Wrong Marks : 1

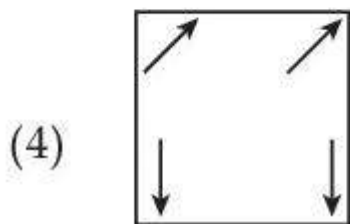
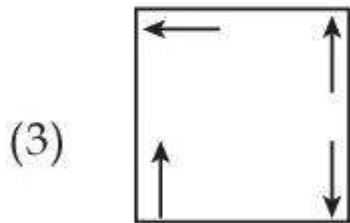
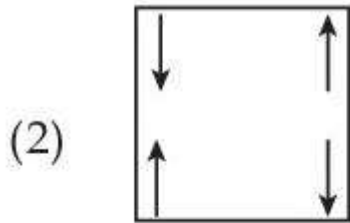
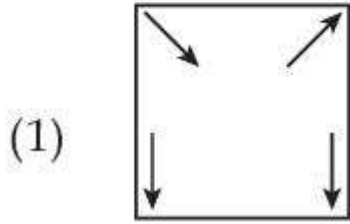
Question Key Details :

Key	Value
Comprehension	MCQ

समस्या आकृति :



श्रृंखला को पूर्ण करने के लिए सही विकल्प चुनिये :



Options :

54025064605. 1

54025064606. 2

54025064607. 3

54025064608. 4

Minimum Instruction Time : 0

Correct Marks : 5 Wrong Marks : 1

Question Key Details :

Key	Value
Comprehension	MCQ

The wrong term in the given number series is :

5, 6, 10, 19, 35, 60, 92, 145

(1) 145

(2) 35

(3) 92

(4) 60

Options :

54025064609. 1

54025064610. 2

54025064611. 3

54025064612. 4

Question Number : 233 Question Id : 54025016153 Question Type : MCQ Option Shuffling : No

Is Question Mandatory : No Calculator : None Response Time : N.A Think Time : N.A

Minimum Instruction Time : 0

Correct Marks : 5 Wrong Marks : 1

Question Key Details :

Key	Value
Comprehension	MCQ

दी गई श्रृंखला में कौन-सा पद गलत है ?

5, 6, 10, 19, 35, 60, 92, 145

(1) 145

(2) 35

(3) 92

(4) 60

Options :

54025064609. 1

54025064610. 2

54025064611. 3

54025064612. 4

Question Number : 234 Question Id : 54025016154 Question Type : MCQ Option Shuffling : No

Is Question Mandatory : No Calculator : None Response Time : N.A Think Time : N.A

Minimum Instruction Time : 0

Correct Marks : 5 Wrong Marks : 1

Question Key Details :

Key	Value
Comprehension	MCQ

Look at the statements and mark the correct answer based on the conclusions which follow :

Statement : A. I play video games when I am bored.
B. I am never bored in my friend's company.

Conclusion : I. If I am bored, I play video games.
II. If I am bored, I seek my friend's company.

- (1) Only conclusion I follows.
- (2) Only conclusion II follows.
- (3) Both conclusion I and II follows.
- (4) Neither conclusion I nor II follows.

Options :

54025064613. 1

54025064614. 2

54025064615. 3

54025064616. 4

Question Number : 234 Question Id : 54025016154 Question Type : MCQ Option Shuffling : No

Is Question Mandatory : No Calculator : None Response Time : N.A Think Time : N.A

Minimum Instruction Time : 0

Correct Marks : 5 Wrong Marks : 1

Question Key Details :

Key	Value
Comprehension	MCQ

निम्नलिखित कथन पर विचार कीजिए तथा उससे संबंधित निष्कर्ष के आधार पर सही उत्तर चुनिये :

कथन : A. जब मैं ऊबता हूँ तो मैं वीडियो गेम खेलता हूँ।

B. मैं अपने मित्रों के साथ कभी ऊबता नहीं हूँ।

निष्कर्ष : I. यदि मैं ऊबता हूँ, मैं वीडियो गेम खेलता हूँ।

II. यदि मैं ऊबता हूँ, मैं अपने मित्रों का साथ चाहता हूँ।

(1) केवल निष्कर्ष I का अनुपालन होता है।

(2) केवल निष्कर्ष II का अनुपालन होता है।

(3) निष्कर्ष I और II दोनों का अनुपालन होता है।

(4) न तो निष्कर्ष I का और न ही II का अनुपालन होता है।

Options :

54025064613. 1

54025064614. 2

54025064615. 3

54025064616. 4

Question Number : 235 Question Id : 54025016155 Question Type : MCQ Option Shuffling : No

Is Question Mandatory : No Calculator : None Response Time : N.A Think Time : N.A

Minimum Instruction Time : 0

Correct Marks : 5 Wrong Marks : 1

Question Key Details :

Key	Value
Comprehension	MCQ

Which letter will be sixth to the left of the nineteenth letter from the right end, in the following alphabets series.

A, B, C, D, E, F, G, H, I, J, K, L, M, N, O, P, Q, R, S, T, U, V, W, X, Y, Z

- (1) M
- (2) Y
- (3) N
- (4) B

Options :

54025064617. 1

54025064618. 2

54025064619. 3

54025064620. 4

Question Number : 235 Question Id : 54025016155 Question Type : MCQ Option Shuffling : No

Is Question Mandatory : No Calculator : None Response Time : N.A Think Time : N.A

Minimum Instruction Time : 0

Correct Marks : 5 Wrong Marks : 1

Question Key Details :

Key	Value
Comprehension	MCQ

निम्नलिखित वर्णमाला में दाहिनी ओर से उन्नीसवें अक्षर के बायीं ओर छठा अक्षर कौन-सा होगा ?

A, B, C, D, E, F, G, H, I, J, K, L, M, N, O, P, Q, R, S, T, U, V, W, X, Y, Z

- (1) M
- (2) Y
- (3) N
- (4) B

Options :

54025064617. 1

54025064618. 2

54025064619. 3

54025064620. 4

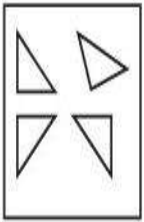
Question Number : 236 Question Id : 54025016156 Question Type : MCQ Option Shuffling : No Is Question Mandatory : No Calculator : None Response Time : N.A Think Time : N.A Minimum Instruction Time : 0

Correct Marks : 5 Wrong Marks : 1

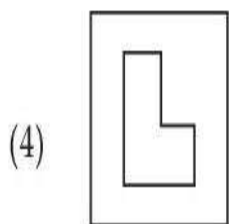
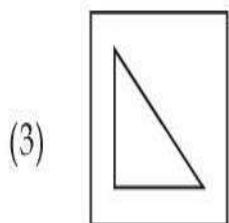
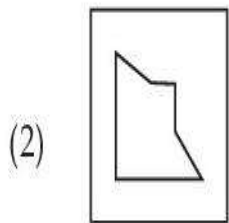
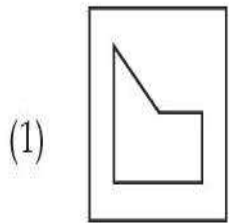
Question Key Details :

Key	Value
Comprehension	MCQ

Find out which of the figures can be formed using the pieces given in problem figure.



Problem figure.



Options :

54025064621. 1

54025064622. 2

54025064623. 3

54025064624. 4

Question Number : 236 Question Id : 54025016156 Question Type : MCQ Option Shuffling : No

Is Question Mandatory : No Calculator : None Response Time : N.A Think Time : N.A

Minimum Instruction Time : 0

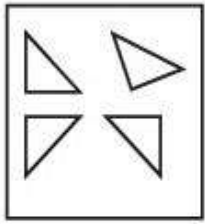
Correct Marks : 5 Wrong Marks : 1

Question Key Details :

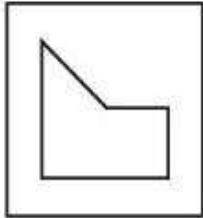
Key	Value
Comprehension	MCQ

ज्ञात कीजिये कि दिये गये टुकड़ों से कौन-सी आकृति बनायी जा सकती है?


समस्या आकृति।



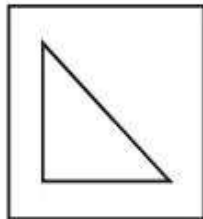
(1)




(2)



(3)



(4)



Options :

54025064621. 1

54025064622. 2

54025064623. 3

54025064624. 4

Question Number : 237 Question Id : 54025016157 Question Type : MCQ Option Shuffling : No

Is Question Mandatory : No Calculator : None Response Time : N.A Think Time : N.A

Minimum Instruction Time : 0

Correct Marks : 5 Wrong Marks : 1

Question Key Details :

Key	Value
Comprehension	MCQ

Statement :

An advertisement by a public sector bank : we offer higher fixed deposit interest in comparison to other public sector banks.

Assumption :

- I. The different public sector banks offer different deposit rates.
- II. There is competition in the market to attract customers.

From the above two assumptions, decide which of the assumption is implicit in the statement ?

- (1) Only assumption I is implicit
- (2) Only assumption II is implicit
- (3) Both I and II are implicit
- (4) Neither I nor II is implicit

Options :

54025064625. 1

54025064626. 2

54025064627. 3

54025064628. 4

Question Number : 237 Question Id : 54025016157 Question Type : MCQ Option Shuffling : No

Is Question Mandatory : No Calculator : None Response Time : N.A Think Time : N.A

Minimum Instruction Time : 0

Correct Marks : 5 Wrong Marks : 1

Question Key Details :

Key	Value
Comprehension	MCQ

कथन :

किसी सार्वजनिक क्षेत्र के बैंक का विज्ञापन : हम अन्य सार्वजनिक क्षेत्र की बैंकों की तुलना में उच्च सावधि जमा ब्याज प्रदान करते हैं।

पूर्वानुमान :

I. सार्वजनिक क्षेत्र के विभिन्न बैंक विभिन्न जमा दरें प्रदान करते हैं।

II. बाजार में ग्राहकों को आकर्षित करने की प्रतिस्पर्धा है।

उपर्युक्त दो पूर्वानुमानों से निश्चित कीजिए कि कथन में कौन-सा पूर्वानुमान अंतर्निहित है?

(1) केवल पूर्वानुमान I अंतर्निहित है

(2) केवल पूर्वानुमान II अंतर्निहित है

(3) I और II दोनों अंतर्निहित हैं

(4) न तो I और न ही II अंतर्निहित है

Options :

54025064625. 1

54025064626. 2

54025064627. 3

54025064628. 4

Question Number : 238 Question Id : 54025016158 Question Type : MCQ Option Shuffling : No

Is Question Mandatory : No Calculator : None Response Time : N.A Think Time : N.A

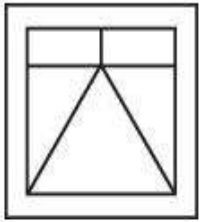
Minimum Instruction Time : 0

Correct Marks : 5 Wrong Marks : 1

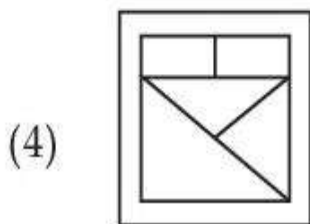
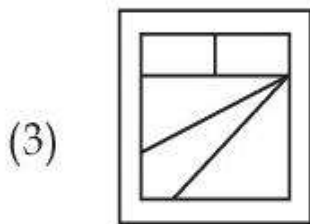
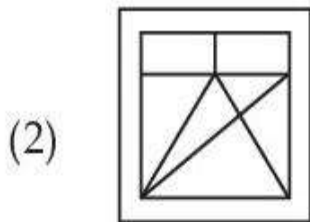
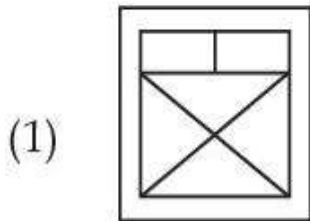
Question Key Details :

Key	Value
Comprehension	MCQ

Choose the figure in which the problem figure is embedded :



Problem figure



Options :

54025064629. 1

54025064630. 2

54025064631. 3

54025064632. 4

Question Number : 238 Question Id : 54025016158 Question Type : MCQ Option Shuffling : No

Is Question Mandatory : No Calculator : None Response Time : N.A Think Time : N.A

Minimum Instruction Time : 0

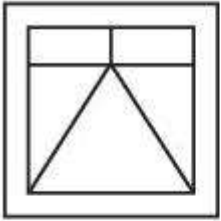
Correct Marks : 5 Wrong Marks : 1

Question Key Details :

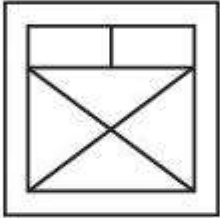
Key	Value
Comprehension	MCQ

उस आकृति को चुनिये जिसमें समस्या आकृति सन्निहित है ?

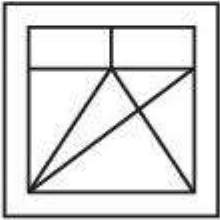
समस्या आकृति



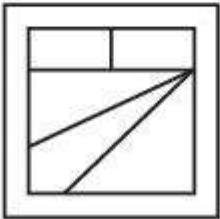
(1)



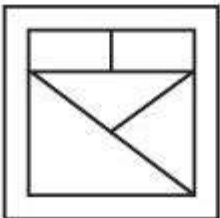
(2)



(3)



(4)



Options :

54025064629. 1

54025064630. 2

54025064631. 3

54025064632. 4

Question Number : 239 Question Id : 54025016159 Question Type : MCQ Option Shuffling : No

Is Question Mandatory : No Calculator : None Response Time : N.A Think Time : N.A

Minimum Instruction Time : 0

Correct Marks : 5 Wrong Marks : 1

Question Key Details :

Key	Value
Comprehension	MCQ

If PANT is TNAP an RATS are STAR; then ELEPHANTS are _____.

- (1) PHANTSELE
- (2) ANTSPHELE
- (3) STNAHPELE
- (4) LEENAPSTH

Options :

54025064633. 1

54025064634. 2

54025064635. 3

54025064636. 4

Question Number : 239 Question Id : 54025016159 Question Type : MCQ Option Shuffling : No

Is Question Mandatory : No Calculator : None Response Time : N.A Think Time : N.A

Minimum Instruction Time : 0

Correct Marks : 5 Wrong Marks : 1

Question Key Details :

Key	Value
Comprehension	MCQ

यदि PANT को TNAP तथा RATS को STAR के रूप में कूटबद्ध किया जाता है, तो ELEPHANTS को किस रूप में कूटबद्ध किया जायेगा।

- (1) PHANTSELE
- (2) ANTSPHELE
- (3) STNAHPELE
- (4) LEENAPSTH

Options :

54025064633. 1

54025064634. 2

54025064635. 3

54025064636. 4

Question Number : 240 Question Id : 54025016160 Question Type : MCQ Option Shuffling : No

Is Question Mandatory : No Calculator : None Response Time : N.A Think Time : N.A

Minimum Instruction Time : 0

Correct Marks : 5 Wrong Marks : 1

Question Key Details :

Key	Value
Comprehension	MCQ

You are a team manager, you find that your employee's performance is inappropriate that induces/creates a stress for you. You should :

- (1) start an incentive mechanism for better performance.
- (2) implement special human resource training for the employees.
- (3) create an organizational culture in which the employee feels to be concerned.
- (4) Terminate the employee.

Options :

54025064637. 1

54025064638. 2

54025064639. 3

54025064640. 4

Question Number : 240 Question Id : 54025016160 Question Type : MCQ Option Shuffling : No

Is Question Mandatory : No Calculator : None Response Time : N.A Think Time : N.A

Minimum Instruction Time : 0

Correct Marks : 5 Wrong Marks : 1

Question Key Details :

Key	Value
Comprehension	MCQ

आप टीम प्रबंधक हैं, आप पाते हैं कि आपके कर्मचारी का निष्पादन अनुपयुक्त है जो आपके लिए तनाव उत्पन्न करता है, आपको क्या करना चाहिए?

- (1) बेहतर निष्पादन के लिए प्रोत्साहन प्रक्रिया आरंभ करना चाहिए।
- (2) कर्मचारियों के लिए विशेष मानव संसाधन प्रशिक्षण का कार्यान्वयन करना चाहिए।
- (3) सांगठनिक संस्कृति निर्मित करना चाहिए जिसमें कर्मचारी अपने आपको संबद्ध महसूस करें।
- (4) कर्मचारी को निलंबित करना चाहिए।

Options :

54025064637. 1

54025064638. 2

54025064639. 3

54025064640. 4

Question Number : 241 Question Id : 54025016161 Question Type : MCQ Option Shuffling : No

Is Question Mandatory : No Calculator : None Response Time : N.A Think Time : N.A

Minimum Instruction Time : 0

Correct Marks : 5 Wrong Marks : 1

Question Key Details :

Key	Value
Comprehension	MCQ

Where is Ajanta cave ?

- (1) Kerala
- (2) Ajmer
- (3) Maharashtra
- (4) Gujrat

Options :

54025064641. 1

54025064642. 2

54025064643. 3

54025064644. 4

Question Number : 241 Question Id : 54025016161 Question Type : MCQ Option Shuffling : No

Is Question Mandatory : No Calculator : None Response Time : N.A Think Time : N.A

Minimum Instruction Time : 0

Correct Marks : 5 Wrong Marks : 1

Question Key Details :

Key	Value
Comprehension	MCQ

अजंता गुफा कहाँ है?

- (1) केरल
- (2) अजमेर
- (3) महाराष्ट्र
- (4) गुजरात

Options :

54025064641. 1

54025064642. 2

54025064643. 3

54025064644. 4

Question Number : 242 Question Id : 54025016162 Question Type : MCQ Option Shuffling : No

Is Question Mandatory : No Calculator : None Response Time : N.A Think Time : N.A

Minimum Instruction Time : 0

Correct Marks : 5 Wrong Marks : 1

Question Key Details :

Key	Value
Comprehension	MCQ

Who ordered the annexation of Awadh from Wajid Ali Shah ?

- (1) Lord Dalhousie
- (2) Lord Canning
- (3) Lord Warren Hastings
- (4) Lord Lansdown

Options :

54025064645. 1

54025064646. 2

54025064647. 3

54025064648. 4

Question Number : 242 Question Id : 54025016162 Question Type : MCQ Option Shuffling : No

Is Question Mandatory : No Calculator : None Response Time : N.A Think Time : N.A

Minimum Instruction Time : 0

Correct Marks : 5 Wrong Marks : 1

Question Key Details :

Key	Value
Comprehension	MCQ

वाजिद अली शाह से अवध के समामेलन का आदेश किसने जारी किया ?

- (1) लार्ड डलहौजी
- (2) लार्ड केनिंग
- (3) लार्ड वारेन हेस्टिंग
- (4) लार्ड लैंसडाउन

Options :

54025064645. 1

54025064646. 2

54025064647. 3

54025064648. 4

Question Number : 243 Question Id : 54025016163 Question Type : MCQ Option Shuffling : No

Is Question Mandatory : No Calculator : None Response Time : N.A Think Time : N.A

Minimum Instruction Time : 0

Correct Marks : 5 Wrong Marks : 1

Question Key Details :

Key	Value
Comprehension	MCQ

Match List - I with List - II.

List - I

(Dynasty)

- (A) The Kingdom of Gaud
- (B) The Chalukyas of Vatapi
- (C) The Kingdom of Thaneshwar
- (D) The Maitrakas of Vallabhi

List - II

(Founder)

- (I) Bhattarka
- (II) Jayasimha
- (III) Shashanka
- (IV) Pushyabhuti

Choose the correct answer from the options given below :

- (1) (A)-(II), (B)-(III), (C)-(I), (D)-(IV)
- (2) (A)-(III), (B)-(II), (C)-(IV), (D)-(I)
- (3) (A)-(I), (B)-(III), (C)-(II), (D)-(IV)
- (4) (A)-(I), (B)-(IV), (C)-(II), (D)-(III)

Options :

54025064649. 1

54025064650. 2

54025064651. 3

54025064652. 4

Question Number : 243 Question Id : 54025016163 Question Type : MCQ Option Shuffling : No

Is Question Mandatory : No Calculator : None Response Time : N.A Think Time : N.A

Minimum Instruction Time : 0

Correct Marks : 5 Wrong Marks : 1

Question Key Details :

Key	Value
Comprehension	MCQ

सूची- I से सूची- II का मिलान कीजिए:

सूची- I

(राजवंश)

- (A) गौड़ साम्राज्य
- (B) वातपी के चालुक्य
- (C) थानेश्वर साम्राज्य
- (D) वल्लभी के मैत्रक

सूची- II

(संस्थापक)

- (I) भट्टार्क
- (II) जयसिंह
- (III) शंशाक
- (IV) पुष्यभूति

नीचे दिए गए विकल्पों में से सही उत्तर का चयन कीजिए:

- (1) (A)-(II), (B)-(III), (C)-(I), (D)-(IV)
- (2) (A)-(III), (B)-(II), (C)-(IV), (D)-(I)
- (3) (A)-(I), (B)-(III), (C)-(II), (D)-(IV)
- (4) (A)-(I), (B)-(IV), (C)-(II), (D)-(III)

Options :

54025064649. 1

54025064650. 2

54025064651. 3

54025064652. 4

Question Number : 244 Question Id : 54025016164 Question Type : MCQ Option Shuffling : No

Is Question Mandatory : No Calculator : None Response Time : N.A Think Time : N.A

Minimum Instruction Time : 0

Correct Marks : 5 Wrong Marks : 1

Question Key Details :

Key	Value
Comprehension	MCQ

When did Dual Government of Bengal start ?

- (1) 1765
- (2) 1825
- (3) 1855
- (4) 1775

Options :

54025064653. 1

54025064654. 2

54025064655. 3

54025064656. 4

Question Number : 244 Question Id : 54025016164 Question Type : MCQ Option Shuffling : No

Is Question Mandatory : No Calculator : None Response Time : N.A Think Time : N.A

Minimum Instruction Time : 0

Correct Marks : 5 Wrong Marks : 1

Question Key Details :

Key	Value
Comprehension	MCQ

बंगाल का द्वैध शासन कब आरंभ हुआ ?

- (1) 1765
- (2) 1825
- (3) 1855
- (4) 1775

Options :

54025064653. 1

54025064654. 2

54025064655. 3

54025064656. 4

Question Number : 245 Question Id : 54025016165 Question Type : MCQ Option Shuffling : No

Is Question Mandatory : No Calculator : None Response Time : N.A Think Time : N.A

Minimum Instruction Time : 0

Correct Marks : 5 Wrong Marks : 1

Question Key Details :

Key	Value
Comprehension	MCQ

Which of the following is a renewable natural resource ?

- (1) Timber
- (2) Thorium
- (3) Natural Gas
- (4) Coal

Options :

54025064657. 1

54025064658. 2

54025064659. 3

54025064660. 4

Question Number : 245 Question Id : 54025016165 Question Type : MCQ Option Shuffling : No

Is Question Mandatory : No Calculator : None Response Time : N.A Think Time : N.A

Minimum Instruction Time : 0

Correct Marks : 5 Wrong Marks : 1

Question Key Details :

Key	Value
Comprehension	MCQ

नवीकरणीय प्राकृतिक संसाधन निम्नलिखित में से कौन-सा है ?

- (1) इमारती लकड़ी
- (2) थोरियम
- (3) प्राकृतिक गैस
- (4) कोयला

Options :

54025064657. 1

54025064658. 2

54025064659. 3

54025064660. 4

Question Number : 246 Question Id : 54025016166 Question Type : MCQ Option Shuffling : No

Is Question Mandatory : No Calculator : None Response Time : N.A Think Time : N.A

Minimum Instruction Time : 0

Correct Marks : 5 Wrong Marks : 1

Question Key Details :

Key	Value
Comprehension	MCQ

Which of these forms of carbon are used to determine carbon dating ?

- (1) Carbon - 12
- (2) Carbon - 14
- (3) Coke Charcoal
- (4) Graphite

Options :

54025064661. 1

54025064662. 2

54025064663. 3

54025064664. 4

Question Number : 246 Question Id : 54025016166 Question Type : MCQ Option Shuffling : No

Is Question Mandatory : No Calculator : None Response Time : N.A Think Time : N.A

Minimum Instruction Time : 0

Correct Marks : 5 Wrong Marks : 1

Question Key Details :

Key	Value
Comprehension	MCQ

कार्बन कालनिर्धारण को सुनिश्चित करने के लिए कार्बन के निम्नलिखित में से किस रूप का प्रयोग किया जाता है?

- (1) कार्बन - 12
- (2) कार्बन - 14
- (3) कोक चारकोल
- (4) ग्रेफाइट

Options :

54025064661. 1

54025064662. 2

54025064663. 3

54025064664. 4

Question Number : 247 Question Id : 54025016167 Question Type : MCQ Option Shuffling : No

Is Question Mandatory : No Calculator : None Response Time : N.A Think Time : N.A

Minimum Instruction Time : 0

Correct Marks : 5 Wrong Marks : 1

Question Key Details :

Key	Value
Comprehension	MCQ

The collection of Male Reproductive Part of a flower is called :

- (1) Androecium
- (2) Corolla
- (3) Calyx
- (4) Gynoecium

Options :

54025064665. 1

54025064666. 2

54025064667. 3

54025064668. 4

Question Number : 247 Question Id : 54025016167 Question Type : MCQ Option Shuffling : No

Is Question Mandatory : No Calculator : None Response Time : N.A Think Time : N.A

Minimum Instruction Time : 0

Correct Marks : 5 Wrong Marks : 1

Question Key Details :

Key	Value
Comprehension	MCQ

पुष्प के नर जनन भाग का संकलन कहलाता है :

- (1) पुमंग
- (2) दलपुंज
- (3) बाह्यदल पुंज
- (4) जीनोसियम

Options :

54025064665. 1

54025064666. 2

54025064667. 3

54025064668. 4

Question Number : 248 Question Id : 54025016168 Question Type : MCQ Option Shuffling : No

Is Question Mandatory : No Calculator : None Response Time : N.A Think Time : N.A

Minimum Instruction Time : 0

Correct Marks : 5 Wrong Marks : 1

Question Key Details :

Key	Value
Comprehension	MCQ

In mRNA, vaccine, what is the meaning of 'm' :

- (1) Messenger
- (2) Moderna
- (3) Membrane
- (4) Modeling

Options :

54025064669. 1

54025064670. 2

54025064671. 3

54025064672. 4

Question Number : 248 Question Id : 54025016168 Question Type : MCQ Option Shuffling : No

Is Question Mandatory : No Calculator : None Response Time : N.A Think Time : N.A

Minimum Instruction Time : 0

Correct Marks : 5 Wrong Marks : 1

Question Key Details :

Key	Value
Comprehension	MCQ

एम आर एन ए (mRNA) टीके में 'm' का आशय क्या है :

- (1) मेसेन्जर
- (2) मोडर्ना
- (3) मेम्ब्रेन
- (4) मॉडलिंग

Options :

54025064669. 1

54025064670. 2

54025064671. 3

54025064672. 4

Question Number : 249 Question Id : 54025016169 Question Type : MCQ Option Shuffling : No

Is Question Mandatory : No Calculator : None Response Time : N.A Think Time : N.A

Minimum Instruction Time : 0

Correct Marks : 5 Wrong Marks : 1

Question Key Details :

Key	Value
Comprehension	MCQ

Where was International Tourism Fair FITUR 2023, held ?

- (1) Tokyo
- (2) Delhi
- (3) Beijing
- (4) Madrid

Options :

54025064673. 1

54025064674. 2

54025064675. 3

54025064676. 4

Question Number : 249 Question Id : 54025016169 Question Type : MCQ Option Shuffling : No

Is Question Mandatory : No Calculator : None Response Time : N.A Think Time : N.A

Minimum Instruction Time : 0

Correct Marks : 5 Wrong Marks : 1

Question Key Details :

Key	Value
Comprehension	MCQ

अंतर्राष्ट्रीय पर्यटन मेला FITUR 2023 कहाँ आयोजित हुआ था ?

- (1) टोक्यो
- (2) दिल्ली
- (3) बीजिंग
- (4) मैड्रिड

Options :

54025064673. 1

54025064674. 2

54025064675. 3

54025064676. 4

Question Number : 250 Question Id : 54025016170 Question Type : MCQ Option Shuffling : No

Is Question Mandatory : No Calculator : None Response Time : N.A Think Time : N.A

Minimum Instruction Time : 0

Correct Marks : 5 Wrong Marks : 1

Question Key Details :

Key	Value
Comprehension	MCQ

According to Times Higher Education report, 2022, which of the following university has topped the ranking list for the 7th consecutive times ?

- (1) Massachusetts Institute of Technology
- (2) Havard University
- (3) Cambridge University
- (4) Oxford University

Options :

54025064677. 1

54025064678. 2

54025064679. 3

54025064680. 4

Question Number : 250 Question Id : 54025016170 Question Type : MCQ Option Shuffling : No

Is Question Mandatory : No Calculator : None Response Time : N.A Think Time : N.A

Minimum Instruction Time : 0

Correct Marks : 5 Wrong Marks : 1

Question Key Details :

Key	Value
Comprehension	MCQ

टाइम्स उच्चतर शिक्षा रिपोर्ट, 2022 के अनुसार निम्नलिखित में से किस विश्वविद्यालय में लगातार 7वीं बार रैंकिंग सूची का शीर्ष स्थान हासिल किया है?

- (1) मेसाच्यूसेट्स प्रौद्योगिकी संस्थान
- (2) हावर्ड विश्वविद्यालय
- (3) कैम्ब्रिज विश्वविद्यालय
- (4) आक्सफोर्ड विश्वविद्यालय

Options :

54025064677. 1

54025064678. 2

54025064679. 3

54025064680. 4

Question Number : 251 Question Id : 54025016171 Question Type : MCQ Option Shuffling : No

Is Question Mandatory : No Calculator : None Response Time : N.A Think Time : N.A

Minimum Instruction Time : 0

Correct Marks : 5 Wrong Marks : 1

Question Key Details :

Key	Value
Comprehension	MCQ

'Bailey suspension Bridge' has been inaugurated in which state/UT ?

- (1) Assam
- (2) Arunachal Pradesh
- (3) Jammu and Kashmir
- (4) Karanataka

Options :

54025064681. 1

54025064682. 2

54025064683. 3

54025064684. 4

Question Number : 251 Question Id : 54025016171 Question Type : MCQ Option Shuffling : No

Is Question Mandatory : No Calculator : None Response Time : N.A Think Time : N.A

Minimum Instruction Time : 0

Correct Marks : 5 Wrong Marks : 1

Question Key Details :

Key	Value
Comprehension	MCQ

'बैली झूला पुल (बैली सस्पेंशन ब्रिज) का उद्घाटन किस राज्य/संघ शासित क्षेत्र में किया गया है ?

- (1) असम
- (2) अरुणाचल प्रदेश
- (3) जम्मू और कश्मीर
- (4) कर्नाटक

Options :

54025064681. 1

54025064682. 2

54025064683. 3

54025064684. 4

Question Number : 252 Question Id : 54025016172 Question Type : MCQ Option Shuffling : No

Is Question Mandatory : No Calculator : None Response Time : N.A Think Time : N.A

Minimum Instruction Time : 0

Correct Marks : 5 Wrong Marks : 1

Question Key Details :

Key	Value
Comprehension	MCQ

Indian Government launched NIPUN project on June 20, 2022. What does NIPUN stands for ?

- (1) National infrastructure for promoting Upskilling of Nirman workers
- (2) National Initiative for promotion of Upskilling of Nirman workers
- (3) Nation Institute for promoting Upskilling of Nirman workers
- (4) National integration for promoting understanding of National workers

Options :

54025064685. 1

54025064686. 2

54025064687. 3

54025064688. 4

Question Number : 252 Question Id : 54025016172 Question Type : MCQ Option Shuffling : No**Is Question Mandatory : No Calculator : None Response Time : N.A Think Time : N.A****Minimum Instruction Time : 0****Correct Marks : 5 Wrong Marks : 1****Question Key Details :**

Key	Value
Comprehension	MCQ

भारत सरकार ने 20 जून 2022 को निपुण (NIPUN) परियोजना का शुभारंभ किया। निपुण (NIPUN) का पूर्ण रूप है :

- (1) नेशनल इन्फ्रास्ट्रक्चर फॉर प्रोमोटिंग अपस्किलिंग ऑफ निर्माण वर्कर्स
- (2) नेशनल इनीशिएटिव फॉर प्रोमोटिंग अपस्किलिंग ऑफ निर्माण वर्कर्स
- (3) नेशन इन्स्टीट्यूट फॉर प्रोमोटिंग अपस्किलिंग ऑफ निर्माण वर्कर्स
- (4) नेशनल इन्टीग्रेशन फॉर प्रोमोटिंग अंडरस्टैंडिंग ऑफ नेशनल वर्कर्स

Options :

54025064685. 1

54025064686. 2

54025064687. 3

54025064688. 4

Question Number : 253 Question Id : 54025016173 Question Type : MCQ Option Shuffling : No**Is Question Mandatory : No Calculator : None Response Time : N.A Think Time : N.A****Minimum Instruction Time : 0****Correct Marks : 5 Wrong Marks : 1****Question Key Details :**

Key	Value
Comprehension	MCQ

Which country won the FIFA world cup 2022 ?

- (1) France
- (2) Argentina
- (3) Croatia
- (4) Moracco

Options :

54025064689. 1

54025064690. 2

54025064691. 3

54025064692. 4

Question Number : 253 Question Id : 54025016173 Question Type : MCQ Option Shuffling : No

Is Question Mandatory : No Calculator : None Response Time : N.A Think Time : N.A

Minimum Instruction Time : 0

Correct Marks : 5 Wrong Marks : 1

Question Key Details :

Key	Value
Comprehension	MCQ

फीफा विश्वकप 2022 किस देश ने जीता ?

- (1) फ्रांस
- (2) अर्जेन्टीना
- (3) क्रोएशिया
- (4) मोरक्को

Options :

54025064689. 1

54025064690. 2

54025064691. 3

54025064692. 4

**Question Number : 254 Question Id : 54025016174 Question Type : MCQ Option Shuffling : No
Is Question Mandatory : No Calculator : None Response Time : N.A Think Time : N.A
Minimum Instruction Time : 0**

Correct Marks : 5 Wrong Marks : 1

Question Key Details :

Key	Value
Comprehension	MCQ

Which is the largest ocean of the world ?

- (1) Indian ocean
- (2) Arctic ocean
- (3) Atlantic ocean
- (4) Pacific ocean

Options :

54025064693. 1

54025064694. 2

54025064695. 3

54025064696. 4

**Question Number : 254 Question Id : 54025016174 Question Type : MCQ Option Shuffling : No
Is Question Mandatory : No Calculator : None Response Time : N.A Think Time : N.A
Minimum Instruction Time : 0**

Correct Marks : 5 Wrong Marks : 1

Question Key Details :

Key	Value
Comprehension	MCQ

विश्व का सबसे बड़ा महासागर कौन है?

- (1) हिन्द महासागर
- (2) आर्कटिक महासागर
- (3) अटलांटिक महासागर
- (4) प्रशांत महासागर

Options :

54025064693. 1

54025064694. 2

54025064695. 3

54025064696. 4

Question Number : 255 Question Id : 54025016175 Question Type : MCQ Option Shuffling : No

Is Question Mandatory : No Calculator : None Response Time : N.A Think Time : N.A

Minimum Instruction Time : 0

Correct Marks : 5 Wrong Marks : 1

Question Key Details :

Key	Value
Comprehension	MCQ

Which planet is the closest to the sun ?

- (1) Venus
- (2) Mercury
- (3) Jupiter
- (4) Neptune

Options :

54025064697. 1

54025064698. 2

54025064699. 3

54025064700. 4

Question Number : 255 Question Id : 54025016175 Question Type : MCQ Option Shuffling : No

Is Question Mandatory : No Calculator : None Response Time : N.A Think Time : N.A

Minimum Instruction Time : 0

Correct Marks : 5 Wrong Marks : 1

Question Key Details :

Key	Value
Comprehension	MCQ

सूर्य के सबसे निकट ग्रह कौन सा है ?

- (1) शुक्र
- (2) बुध
- (3) बृहस्पति
- (4) वरुण

Options :

54025064697. 1

54025064698. 2

54025064699. 3

54025064700. 4

Question Number : 256 Question Id : 54025016176 Question Type : MCQ Option Shuffling : No

Is Question Mandatory : No Calculator : None Response Time : N.A Think Time : N.A

Minimum Instruction Time : 0

Correct Marks : 5 Wrong Marks : 1

Question Key Details :

Key	Value
Comprehension	MCQ

The Indus River flows in India only through :

- (1) Allahabad
- (2) Madhya Pradesh
- (3) Jammu and Kashmir
- (4) Rajasthan

Options :

54025064701. 1

54025064702. 2

54025064703. 3

54025064704. 4

Question Number : 256 Question Id : 54025016176 Question Type : MCQ Option Shuffling : No

Is Question Mandatory : No Calculator : None Response Time : N.A Think Time : N.A

Minimum Instruction Time : 0

Correct Marks : 5 Wrong Marks : 1

Question Key Details :

Key	Value
Comprehension	MCQ

भारत में सिंधु नदी केवल निम्नलिखित में से प्रवाहित होती है :

- (1) इलाहाबाद
- (2) मध्य प्रदेश
- (3) जम्मू और कश्मीर
- (4) राजस्थान

Options :

54025064701. 1

54025064702. 2

54025064703. 3

54025064704. 4

Question Number : 257 Question Id : 54025016177 Question Type : MCQ Option Shuffling : No

Is Question Mandatory : No Calculator : None Response Time : N.A Think Time : N.A

Minimum Instruction Time : 0

Correct Marks : 5 Wrong Marks : 1

Question Key Details :

Key	Value
Comprehension	MCQ

Which of the following is a 'State' ?

- (1) Mizoram
- (2) Chandigarh
- (3) Laddakh
- (4) Ponducherry

Options :

54025064705. 1

54025064706. 2

54025064707. 3

54025064708. 4

Question Number : 257 Question Id : 54025016177 Question Type : MCQ Option Shuffling : No

Is Question Mandatory : No Calculator : None Response Time : N.A Think Time : N.A

Minimum Instruction Time : 0

Correct Marks : 5 Wrong Marks : 1

Question Key Details :

Key	Value
Comprehension	MCQ

निम्नलिखित में से 'राज्य' कौन सा है?

- (1) मिजोरम
- (2) चंडीगढ़
- (3) लद्दाख
- (4) पुडुचेरी

Options :

54025064705. 1

54025064706. 2

54025064707. 3

54025064708. 4

Question Number : 258 Question Id : 54025016178 Question Type : MCQ Option Shuffling : No

Is Question Mandatory : No Calculator : None Response Time : N.A Think Time : N.A

Minimum Instruction Time : 0

Correct Marks : 5 Wrong Marks : 1

Question Key Details :

Key	Value
Comprehension	MCQ

Finance Minister presented the Union Budget for 2021 - 2022 on :

- (1) 10 February 2021
- (2) 1 February 2021
- (3) 10 March 2021
- (4) 1 March 2021

Options :

54025064709. 1

54025064710. 2

54025064711. 3

54025064712. 4

Question Number : 258 Question Id : 54025016178 Question Type : MCQ Option Shuffling : No

Is Question Mandatory : No Calculator : None Response Time : N.A Think Time : N.A

Minimum Instruction Time : 0

Correct Marks : 5 Wrong Marks : 1

Question Key Details :

Key	Value
Comprehension	MCQ

वित्त मंत्री ने वर्ष 2021 - 2022 का केन्द्रीय बजट कब प्रस्तुत किया ?

- (1) 10 फरवरी 2021
- (2) 1 फरवरी 2021
- (3) 10 मार्च 2021
- (4) 1 मार्च 2021

Options :

54025064709. 1

54025064710. 2

54025064711. 3

54025064712. 4

Question Number : 259 Question Id : 54025016179 Question Type : MCQ Option Shuffling : No

Is Question Mandatory : No Calculator : None Response Time : N.A Think Time : N.A

Minimum Instruction Time : 0

Correct Marks : 5 Wrong Marks : 1

Question Key Details :

Key	Value
Comprehension	MCQ

What is under the PM Poshan Scheme as a part of which Tithi Bhojan will be encouraged ?

- (1) It's a society participation program under which people provide special food to specially abled people on special occasions.
- (2) It's a community participation program under which people provide special food to senior citizens on special occasions.
- (3) It's a community participation program under which people provide special food to children on special occasions.
- (4) It's an individual program under which a person provides normal food to children on daily basis.

Options :

54025064713. 1

54025064714. 2

54025064715. 3

54025064716. 4

Question Number : 259 Question Id : 54025016179 Question Type : MCQ Option Shuffling : No

Is Question Mandatory : No Calculator : None Response Time : N.A Think Time : N.A

Minimum Instruction Time : 0

Correct Marks : 5 Wrong Marks : 1

Question Key Details :

Key	Value
Comprehension	MCQ

पी एम पोषण योजना के अंतर्गत निम्नलिखित में से किसे तिथि भोजन के भाग के रूप में प्रोत्साहित किया जाएगा :

- (1) यह एक सामाजिक सहभागिता कार्यक्रम है जिसके अंतर्गत विशेष अवसरों पर विशेष रूप से समर्थ व्यक्तियों को लोगों द्वारा विशेष भोजन प्रदान किया जाता है।
- (2) यह एक सामुदायिक सहभागिता कार्यक्रम है जिसके अंतर्गत विशेष अवसरों पर वरिष्ठ नागरिकों को लोगों द्वारा विशेष भोजन प्रदान किया जाता है।
- (3) यह एक सामुदायिक सहभागिता कार्यक्रम है जिसके अंतर्गत लोग विशेष अवसरों पर बच्चों को विशेष भोजन प्रदान करते हैं
- (4) यह एक वैयक्तिक कार्यक्रम है जिसके अंतर्गत कोई व्यक्ति रोजाना बच्चों को सामान्य भोजन प्रदान करता है।

Options :

54025064713. 1

54025064714. 2

54025064715. 3

54025064716. 4

Question Number : 260 Question Id : 54025016180 Question Type : MCQ Option Shuffling : No

Is Question Mandatory : No Calculator : None Response Time : N.A Think Time : N.A

Minimum Instruction Time : 0

Correct Marks : 5 Wrong Marks : 1

Question Key Details :

Key	Value
Comprehension	MCQ

Tea cultivation requires :

- (1) warm and moist frost - free climate.
- (2) a cool growing season and bright sunshine at ripening.
- (3) high temperature above 25°C and high humidity.
- (4) hot and humid climate.

Options :

54025064717. 1

54025064718. 2

54025064719. 3

54025064720. 4

Question Number : 260 Question Id : 54025016180 Question Type : MCQ Option Shuffling : No

Is Question Mandatory : No Calculator : None Response Time : N.A Think Time : N.A

Minimum Instruction Time : 0

Correct Marks : 5 Wrong Marks : 1

Question Key Details :

Key	Value
Comprehension	MCQ

चाय की कृषि के लिए आवश्यक है :

- (1) उष्ण एवं आर्द्र शीत मुक्त जलवायु
- (2) उगने के समय शीतल ऋतु तथा पक्वन पर तेज धूप
- (3) 25°C से अधिक उच्च तापमान तथा उच्च आर्द्रता
- (4) उष्ण एवं आर्द्र जलवायु

Options :

54025064717. 1

54025064718. 2

54025064719. 3

54025064720. 4