



Practice, Learn and Achieve  
Your Goal with Prepp

# SSC CHSL Exam

Tier I Previous Paper

Simplifying  
Government Exams

 SSC CHSL	 IAS EXAM	 RRB NTPC	 NTSE	 CDS
 SSC CGL	 CBSE UGC NET	 IBPS PO	 NDA	
 SBI PO	 IBPS CLERK	 AFCAT	 SSC JE	 CTET
 CSIR UGC NET	 CAPF	 IBPS RRB		

[www.prepp.in](http://www.prepp.in)

# Combined Higher Secondary Level Examination 2019 Tier I

Roll Number	
Candidate Name	
Venue Name	
Exam Date	21/10/2020
Exam Time	10:00 AM - 11:00 AM
Subject	CHSL Tier 1

Section : English Language (Basic Knowledge)

Q.1 Select the word which means the same as the group of words given:

Satisfied, with no desire to change or improve

- Ans
- 1. Beneficent
  - 2. Innocent
  - 3. Complacent
  - 4. Adolescent

Question ID : 8161613161  
Status : Answered  
Chosen Option : 3

Q.2 Select the most appropriate meaning of the given idiom:

Sleep on it

- Ans
- 1. To make a decision immediately
  - 2. To make a wrong decision
  - 3. To prefer to sleep than take action
  - 4. To wait before making a decision

Question ID : 8161613158  
Status : Answered  
Chosen Option : 4

Q.3 Select the most appropriate synonym of the given word:

Fraudulent

- Ans
- 1. Repellent
  - 2. Prevalent
  - 3. Deceitful
  - 4. Genuine

Question ID : 8161613163  
Status : Not Answered  
Chosen Option : --

**Q.4** Select the most appropriate word(s) to fill in the blank:

My family is my priority but there were times when I had to \_\_\_\_\_ because of work pressures.

- Ans
- 1. look into
  - 2. sit in
  - 3. pull away
  - 4. put off

Question ID : 8161613165

Status : Answered

Chosen Option : 4

**Comprehension:**

In the following passage some words have been deleted. Fill in the blanks with the help of the alternatives given. Select the most appropriate option for each blank.

One day Willy stumbled upon a novel in a (1)\_\_\_\_\_ bookshop-a Perry Mason book written by Erle Stanley Gardner. He (2)\_\_\_\_\_ the book simply because the title of the book cover looked (3)\_\_\_\_\_. Although it was an unabridged book Willy was able (4)\_\_\_\_\_ it with sufficient comprehension. This was partly because the novel contained (5)\_\_\_\_\_ written in simple, conversational language.

**SubQuestion No : 5**

**Q.5** Select the most appropriate option for blank No. 1.

- Ans
- 1. local
  - 2. location
  - 3. localize
  - 4. locals

Question ID : 8161613146

Status : Answered

Chosen Option : 3

**Comprehension:**

In the following passage some words have been deleted. Fill in the blanks with the help of the alternatives given. Select the most appropriate option for each blank.

One day Willy stumbled upon a novel in a (1)\_\_\_\_\_ bookshop-a Perry Mason book written by Erle Stanley Gardner. He (2)\_\_\_\_\_ the book simply because the title of the book cover looked (3)\_\_\_\_\_. Although it was an unabridged book Willy was able (4)\_\_\_\_\_ it with sufficient comprehension. This was partly because the novel contained (5)\_\_\_\_\_ written in simple, conversational language.

**SubQuestion No : 6**

**Q.6** Select the most appropriate option for blank No. 2.

- Ans
- 1. picked in
  - 2. picked up
  - 3. picked on
  - 4. picked at

Question ID : 8161613147

Status : Answered

Chosen Option : 2

**Comprehension:**

In the following passage some words have been deleted. Fill in the blanks with the help of the alternatives given. Select the most appropriate option for each blank.

One day Willy stumbled upon a novel in a (1)\_\_\_\_\_ bookshop-a Perry Mason book written by Erle Stanley Gardner. He (2)\_\_\_\_\_ the book simply because the title of the book cover looked (3)\_\_\_\_\_. Although it was an unabridged book Willy was able (4)\_\_\_\_\_ it with sufficient comprehension. This was partly because the novel contained (5)\_\_\_\_\_ written in simple, conversational language.

**SubQuestion No : 7**

**Q.7 Select the most appropriate option for blank No. 3.**

- Ans
- 1. attraction
  - 2. attract
  - 3. attractive
  - 4. attracted

Question ID : 8161613148

Status : Answered

Chosen Option : 3

**Comprehension:**

In the following passage some words have been deleted. Fill in the blanks with the help of the alternatives given. Select the most appropriate option for each blank.

One day Willy stumbled upon a novel in a (1)\_\_\_\_\_ bookshop-a Perry Mason book written by Erle Stanley Gardner. He (2)\_\_\_\_\_ the book simply because the title of the book cover looked (3)\_\_\_\_\_. Although it was an unabridged book Willy was able (4)\_\_\_\_\_ it with sufficient comprehension. This was partly because the novel contained (5)\_\_\_\_\_ written in simple, conversational language.

**SubQuestion No : 8**

**Q.8 Select the most appropriate option for blank No. 4.**

- Ans
- 1. to read
  - 2. read
  - 3. to reading
  - 4. reading

Question ID : 8161613149

Status : Answered

Chosen Option : 1

**Comprehension:**

In the following passage some words have been deleted. Fill in the blanks with the help of the alternatives given. Select the most appropriate option for each blank.

One day Willy stumbled upon a novel in a (1)\_\_\_\_\_bookshop-a Perry Mason book written by Erle Stanley Gardner. He (2)\_\_\_\_\_ the book simply because the title of the book cover looked (3)\_\_\_\_\_. Although it was an unabridged book Willy was able (4)\_\_\_\_\_ it with sufficient comprehension. This was partly because the novel contained (5)\_\_\_\_\_ written in simple, conversational language.

**SubQuestion No : 9**

**Q.9 Select the most appropriate option for blank No.5.**

- Ans
- 1. prologue
  - 2. epilogue
  - 3. monologues
  - 4. dialogues

Question ID : 8161613150

Status : Answered

Chosen Option : 4

**Q.10 Select the most appropriate option to substitute the underlined segment in the given sentence. If there is no need to substitute it, select No improvement.**

The film by itself was good but the bit long than I had expected.

- Ans
- 1. the bit longer
  - 2. No Improvement
  - 3. a bit long
  - 4. a bit longer

Question ID : 8161613154

Status : Answered

Chosen Option : 4

**Q.11 Given below are four jumbled sentences. Pick the option that gives their correct order.**

- A. It is played by turning around while reciting a rhyme.
- B. The circling motion is like that of a Sufi dervish.
- C. Fahim Irshad has made a film called 'Aani Maani'.
- D. The movie title is based on a game popular among little children in Uttar Pradesh.

- Ans
- 1. CDAB
  - 2. BDCA
  - 3. ACDB
  - 4. CBAD

Question ID : 8161613152

Status : Answered

Chosen Option : 1

Q.12 Select the most appropriate antonym of the given word:

**BUOYANT**

- Ans
- 1. Cheerful
  - 2. Neutral
  - 3. Gloomy
  - 4. Bouncy

Question ID : 8161613155  
Status : Answered  
Chosen Option : 1

Q.13 Select the correct Indirect form of the given sentence.

“It is a fact that kids model parental behaviour,” said the researcher.

- Ans
- 1. The researcher said that it is a fact that kids model parental behaviour.
  - 2. The researcher has said that it is a fact that kids have modeled parental behaviour.
  - 3. The researcher has been saying that kids model parental behaviour.
  - 4. The researcher says that it is a fact that kids model parental behaviour.

Question ID : 8161613142  
Status : Answered  
Chosen Option : 1

Q.14 Select the wrongly spelt word.

- Ans
- 1. Deterent
  - 2. Irreverent
  - 3. Different
  - 4. Transparent

Question ID : 8161613160  
Status : Answered  
Chosen Option : 1

Q.15 Select the word which means the same as the group of words given:

To make perfect or complete

- Ans
- 1. Complement
  - 2. Attainment
  - 3. Impediment
  - 4. Deportment

Question ID : 8161613162  
Status : Answered  
Chosen Option : 3

Q.16 In the sentence identify the segment which contains the grammatical error.

People with full time sedentary jobs who commuting long distances, may have sleep problems due to lack of exercise.

- Ans
- 1. due to lack of exercise
  - 2. may have sleep problems
  - 3. People with full time sedentary jobs
  - 4. who commuting long distances

Question ID : 8161613144  
Status : Answered  
Chosen Option : 2

Q.17 Select the most appropriate synonym of the given word:

Indomitable

- Ans
- 1. Justifiable
  - 2. Changeable
  - 3. Accessible
  - 4. Invincible

Question ID : 8161613164  
Status : Answered  
Chosen Option : 4

Q.18 Select the most appropriate meaning of the given idiom:

Keep your shirt on

- Ans
- 1. To keep busy
  - 2. To remain cool
  - 3. To work hard
  - 4. To celebrate

Question ID : 8161613157  
Status : Answered  
Chosen Option : 4

Q.19 Select the most appropriate antonym of the given word:

CAUSTIC

- Ans
- 1. Scary
  - 2. Kind
  - 3. Sarcastic
  - 4. Bitter

Question ID : 8161613156  
Status : Answered  
Chosen Option : 3

Q.20 Given below are four jumbled sentences. Pick the option that gives their correct order.

- A. Since then, Pathak has performed in several plays and films.
- B. While studying there, he saw 'Equus,' a play that changed his life forever.
- C. Vinay Pathak was pursuing MBA in New York.
- D. He decided to change tracks and study drama.

- Ans
- 1. CBDA
  - 2. BACD
  - 3. DCAB
  - 4. CADB

Question ID : 8161613151  
Status : Answered  
Chosen Option : 1

Q.21 In the sentence identify the segment which contains the grammatical error.

According to a recent study, drinking green tea thrice a week is associated with a longest and healthy life.

- Ans
- 1. drinking green tea thrice a week
  - 2. a longest and healthy life
  - 3. is associated with
  - 4. According to a recent study

Question ID : 8161613143  
Status : Answered  
Chosen Option : 2

Q.22 Select the wrongly spelt word.

- Ans
- 1. Circueteous
  - 2. Delicious
  - 3. Momentous
  - 4. Courteous

Question ID : 8161613159  
Status : Answered  
Chosen Option : 1

Q.23 Select the most appropriate word to fill in the blank.

Shivangini, the 12 year old archer who \_\_\_\_\_ an injury has been successfully operated by a team of doctors at A.I.I.M.S.

- Ans
- 1. sustained
  - 2. ordained
  - 3. maintained
  - 4. pertained

Question ID : 8161613166  
Status : Answered  
Chosen Option : 1



Q.24 Select the correct passive form of the given sentence.

Dr. Verma advised patients to try out a new medicine for migraine.

- Ans
- 1. The patients were being advised to try out a new medicine for migraine by Dr. Verma.
  - 2. The old patients had been advised to try out a new medicine for migraine by Dr. Verma.
  - 3. Patients were advised to try out a new medicine for migraine by Dr. Verma.
  - 4. Patients have been advised to try out a new medicine for migraine by Dr. Verma.

Question ID : 8161613141  
Status : Answered  
Chosen Option : 3

Q.25 Select the most appropriate option to substitute the underlined segment in the given sentence. If there is no need to substitute it, select No improvement.

I like the place which I live but it would be wonderful to live in the mountains.

- Ans
- 1. who
  - 2. when
  - 3. where
  - 4. No Improvement

Question ID : 8161613153  
Status : Answered  
Chosen Option : 3

Section : General Intelligence

Q.1 Four letter-clusters have been given, out of which three are alike in some manner and one is different. Select the odd one.

- Ans
- 1. EIMQ
  - 2. CGKO
  - 3. DHLN
  - 4. BFJN

Question ID : 8161613182  
Status : Answered  
Chosen Option : 2

Q.2 Select the option that is related to the third number in the same way as the second number is related to the first number.

6 : 252 :: 5 : ?

- Ans
- 1. 150
  - 2. 125
  - 3. 25
  - 4. 100

Question ID : 8161613169  
Status : Answered

Latest Sarkari Jobs, Govt Exam Results,  
Vacancies and updates on one click

Know More

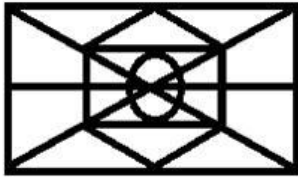
Q.3 Select the term that can replace the question mark (?) in the following series.

BK, FJ, JI, NH, ?, VF

- Ans
- 1. SE
  - 2. SG
  - 3. RG
  - 4. RE

Question ID : 8161613175  
Status : Answered  
Chosen Option : 3

Q.4 Select the option that is embedded in the given figure. (Rotation is not allowed)

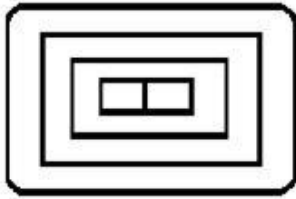


Ans

- 1.
- 2.
- 3.
- 4.

Question ID : 8161613188  
Status : Answered  
Chosen Option : 2


Q.5 Find the number of rectangles in the given figure.



- Ans
- 1. 3
  - 2. 6
  - 3. 4
  - 4. 5

Question ID : 8161613187  
Status : Answered  
Chosen Option : 2

Q.6 Select the option that will fill in the blank and complete the given series.



- Ans
- 1.
  - 2.
  - 3.
  - 4.

Question ID : 8161613186  
Status : Answered  
Chosen Option : 4

Q.7 Select the number that will come next in the following series.

386, 401, 417, 434, ?

- Ans
- 1. 552
  - 2. 351
  - 3. 451
  - 4. 452

Question ID : 8161613172  
Status : Answered  
Chosen Option : 4

Q.8 Study the given pattern carefully and select the number that can replace the question mark (?) in it.

2    10    18  
3    30    84  
4    68    ?

- Ans
- 1. 264
  - 2. 256
  - 3. 260
  - 4. 512

Question ID : 8161613170  
Status : Not Answered  
Chosen Option : --

Q.9 Read the given statements and conclusions carefully. Assuming that the information given in the statements is true, even if it appears to be at variance with commonly known facts, decide which of the given conclusions logically follow(s) from the statements.

**Statements:**

- I. All keyboards are mouse.
- II. Some mouse are printer.

**Conclusions:**

- 1. No printer is keyboard.
- 2. Some printers are mouse.
- 3. All printers are mouse.
- 4. No keyboards are printer.

- Ans
- 1. Only conclusion 1 follows
  - 2. Only conclusion 3 follows
  - 3. Only conclusion 2 follows
  - 4. Only conclusion 4 follows

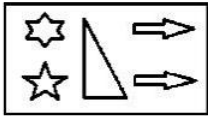
Question ID : 8161613184  
Status : Answered  
Chosen Option : 3

**Q.10** Jay is husband of Geetanjali who is sister of Deepali. Deepali is daughter of Vijay. Sarita is mother-in-law of Rohit. Harish chander is father of Jay and Sarita is wife of Vijay. Vijay and Sarita have only two daughters. How is Rohit related to Vijay?

- Ans**
- 1. Son
  - 2. Father
  - 3. Brother
  - 4. Son-in-law

Question ID : 8161613180  
 Status : Answered  
 Chosen Option : 4

**Q.11** Select the correct mirror image of the given figure when a mirror is placed on the right of the figure.



**Ans**

- 1.
- 2.
- 3.
- 4.

Question ID : 8161613190  
 Status : Answered  
 Chosen Option : 3

Q.12 Three different positions of the same dice are shown. Select the letter that will be on the face opposite to the one having 'f'.



- Ans
- 1. a
  - 2. d
  - 3. g
  - 4. h

Question ID : 8161613185  
Status : Answered  
Chosen Option : 1

Q.13 Select the term that will come next in the following series.

EB, HC, KD, NE, QF, ?

- Ans
- 1. SG
  - 2. TG
  - 3. UH
  - 4. VH

Question ID : 8161613177  
Status : Answered  
Chosen Option : 2

Q.14 उस सही विकल्प का चयन करें जो निम्नलिखित शब्दों को एक तार्किक और अर्थपूर्ण क्रम में व्यवस्थित करता है।

1. गेहूँ का पौधा
2. रोटी
3. बीज
4. आटा

- Ans
- 1. 1, 2, 4, 3
  - 2. 1, 3, 4, 2
  - 3. 2, 1, 3, 4
  - 4. 3, 1, 4, 2

Question ID : 8161613174  
Status : Answered  
Chosen Option : 4

**Q.15** Four number-pairs have been given, out of which three are alike in some manner and one is different. Select the odd one.

- Ans**
- 1. 182 : 13
  - 2. 156 : 12
  - 3. 309 : 17
  - 4. 132 : 11

Question ID : **8161613173**  
Status : **Answered**  
Chosen Option : **3**

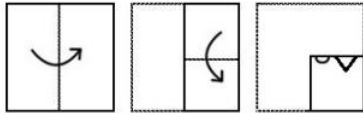
**Q.16** Select the option that is related to the third term in the same way as the second term is related to the first term.

Shoe : Leather :: Paper : ?

- Ans**
- 1. Book
  - 2. Wood
  - 3. Printer
  - 4. Plastic

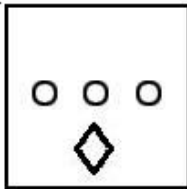
Question ID : **8161613178**  
Status : **Answered**  
Chosen Option : **1**

**Q.17** The sequence of folding a piece of paper and the manner in which the folded paper has been cut is shown in the following figures. How would this paper look when unfolded?

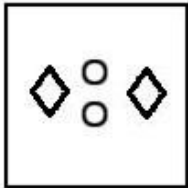


**Ans**

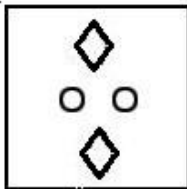
1.



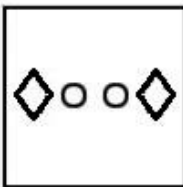
2.



3.



4.



Question ID : 8161613189  
 Status : Answered  
 Chosen Option : 2

**Q.18** Select the number that can replace the question mark (?) in the following series.

0, 2, 10, 30, ?, 130, 222

**Ans**

1. 68

2. 72

3. 60

4. 64

Question ID : 8161613176  
 Status : Answered  
 Chosen Option : 2



Q.19 Four words have been given, out of which three are alike in some manner and one is different. Select the odd one.

- Ans
- 1. Radish
  - 2. Potato
  - 3. Peas
  - 4. Carrot

Question ID : 8161613181  
Status : Answered  
Chosen Option : 3

Q.20 Study the given pattern carefully and select the number that can replace the question mark (?) in it.

9, 12, 48

17, 20, 80

33, 36, ?

- Ans
- 1. 118
  - 2. 144
  - 3. 110
  - 4. 120

Question ID : 8161613171  
Status : Answered  
Chosen Option : 2

Q.21 Which two signs need to be interchanged to make the following equation correct?

$$5 \times 4 + 12 - 3 \div 6 = 18$$

- Ans
- 1. + and -
  - 2.  $\div$  and -
  - 3.  $\div$  and  $\times$
  - 4.  $\times$  and +

Question ID : 8161613168  
Status : Answered  
Chosen Option : 2

Q.22 Select the letters that can replace the question marks (?) in the following series respectively.

AG, GL, MQ, S?, ?A

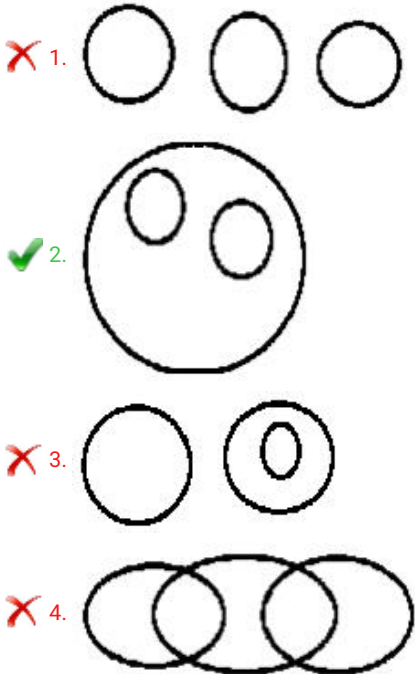
- Ans
- 1. V and Y
  - 2. V and Z
  - 3. T and Y
  - 4. U and Y

Question ID : 8161613179  
Status : Answered

Q.23 Select the Venn diagram that best represents the relationship between the following classes.

Devanagari, Hindi, Sanskrit

Ans



Question ID : 8161613191  
Status : Answered  
Chosen Option : 1

Q.24 Four words have been given, out of which three are alike in some manner and one is different. Select the odd one.

Ans

- ✗ 1. Kelvin  
✗ 2. Celsius  
✓ 3. Pascal  
✗ 4. Fahrenheit

Question ID : 8161613183  
Status : Answered  
Chosen Option : 3

Q.25 In a company there are 3 departments - IT, HR and Help Desk. In the IT department there are 125 employees and in the HR department the number of employees is  $\frac{1}{5}$ th of IT. The helpdesk department has 20 employees less than total employees in IT and HR together. What is the total number of employees working in all three departments?

Ans

- ✗ 1. 150  
✗ 2. 170  
✓ 3. 280  
✗ 4. 180


Question ID : 8161613167  
Status : Not Answered  
Chosen Option : --

Q.1 If  $x = \sqrt[3]{5} + 2$ , then the value of  $x^3 = 6x^2 + 12x - 12$  is equal to:

- Ans
- 1. 0
  - 2. 2
  - 3. 1
  - 4. -1

Question ID : 8161613205  
Status : Not Answered  
Chosen Option : --

Q.2 The pie-chart shows percentage-wise distribution of teachers who teach six different subjects. Study the pie chart and answer the question:



Total number of teachers = 1650

What is the total number of teachers teaching English, Maths and Physics?

- Ans
- 1. 857
  - 2. 950
  - 3. 975
  - 4. 957

Question ID : 8161613215  
Status : Answered  
Chosen Option : 4

Q.3 In  $\triangle ABC$ ,  $\angle ABC = 6\angle ACB$  and  $\angle BAC = 5\angle ACB$ . If  $AB = 7$  cm and  $AC = 25$  cm, then the length of  $BC$  is equal to:

- Ans
- 1. 24 cm
  - 2. 32 cm
  - 3. 26 cm
  - 4. 12 cm

Question ID : 8161613204  
Status : Answered  
Chosen Option : 1

Q.4 If 8- digit number 4432A43B is divisible by 9 and 5, then the sum of A and B is equal to:

- Ans
- 1. 12
  - 2. 5
  - 3. 7
  - 4. 8

Question ID : 8161613208  
Status : Answered  
Chosen Option : 3

Q.5 A train covers a distance of 12 km in 12 minutes. If its speed is decreased by 5 km/h, then the time taken by it to cover the distance of 22 km will be:

- Ans
- 1. 24 minutes
  - 2. 20 minutes
  - 3. 22 minutes
  - 4. 18 minutes

Question ID : 8161613193  
Status : Answered  
Chosen Option : 1

Q.6 If  $\frac{\sin \theta + \cos \theta}{\sin \theta - \cos \theta} = 3$  and  $\theta$  is an acute angle, then the value of  $\frac{3 \sin \theta + 4 \cos \theta}{8 \cos \theta - 3 \sin \theta}$  is:

- Ans
- 1. 10
  - 2.  $\frac{1}{2}$
  - 3. 5
  - 4. 2

Question ID : 8161613211  
Status : Answered  
Chosen Option : 3

Q.7 The ratio of the present ages of A and B is 1 : 3. After 10 years, the ratio of their ages will be 2 : 5. Find B's present age.

- Ans
- 1. 70 years
  - 2. 85 years
  - 3. 90 years
  - 4. 80 years

Question ID : 8161613199  
Status : Answered  
Chosen Option : 3

**Q.8** A can do a work in 15 days and B can do it in 10 days. If they work together for 4 days, then the fraction of the work left is:

**Ans**

1.  $\frac{3}{4}$

2.  $\frac{2}{3}$

3.  $\frac{1}{3}$

4.  $\frac{1}{4}$

Question ID : 8161613192

Status : Answered

Chosen Option : 3

**Q.9** If  $x \left( 5 - \frac{2}{x} \right) = \frac{5}{x}$ , then the value of  $x^2 + \frac{1}{x^2}$  is equal to:

**Ans**

1.  $2\frac{4}{25}$

2.  $2\frac{1}{25}$

3.  $\frac{4}{25}$

4.  $2\frac{3}{25}$

Question ID : 8161613206

Status : Answered

Chosen Option : 1

**Q.10** The perimeter of a rectangle is 80 cm and its area is  $375 \text{ cm}^2$ . What is the difference between the length and the breadth of the rectangle?

**Ans**

1. 12 cm

2. 20 cm

3. 10 cm

4. 16 cm

Question ID : 8161613194

Status : Answered

Chosen Option : 3

Q.11 If  $\sin 7x = \cos 11x$ ,  $0^\circ < x < 90^\circ$ , then the value of  $\tan 9x$  is:

Ans

1.  $\frac{\sqrt{3}}{2}$

2. 1

3.  $\frac{1}{\sqrt{3}}$

4.  $\sqrt{3}$

Question ID : 8161613210

Status : Answered

Chosen Option : 2

Q.12 AB एक वृत्त का व्यास है। A पर खींची गई एक स्पर्श रेखा पर C एक बिंदु है। यदि  $AB = 24$  cm और  $AC = 7$  cm है, तो BC की लंबाई है:

Ans

1. 50 cm

2. 15 cm

3. 25 cm

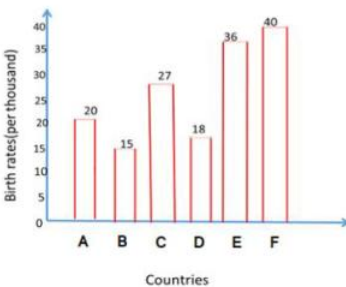
4. 26 cm

Question ID : 8161613201

Status : Answered

Chosen Option : 3

Q.13 The following bar chart represents the birth rate (per thousand) of six different countries. Study the bar chart and answer the question given below.



The birth rate of Country E is what per cent of the birth rate of Country A?

Ans

1. 120%

2. 180%

3. 150%

4. 160%

Question ID : 8161613214

Status : Answered

Chosen Option : 2

Q.14 The average of A, B and C is 18 and that of C, D and E is 12 and that of E and F is 6.5 and that of E and C is 3.5. What is the average of A, B, C, D, E and F?

- Ans
- 1. 24
  - 2. 16
  - 3. 18
  - 4. 22


Question ID : 8161613195  
Status : Not Answered  
Chosen Option : --

Q.15 If  $a^2 + \frac{1}{a^2} = 98$ ,  $a > 0$ , then the value of  $a^3 + \frac{1}{a^3}$  will be:

- Ans
- 1. 960
  - 2. 950
  - 3. 970
  - 4. 870

Question ID : 8161613207  
Status : Answered  
Chosen Option : 3

Q.16 The pie-chart shows percentage-wise distribution of teachers who teach six different subjects. Study the pie chart and answer the question.



Total number of teachers = 1650

What is the difference between the total number of teachers who teach Physics and Maths and the total number of teachers who teach chemistry and biology?

- Ans
- 1. 60
  - 2. 76
  - 3. 66
  - 4. 68

Question ID : 8161613216  
Status : Answered  
Chosen Option : 3



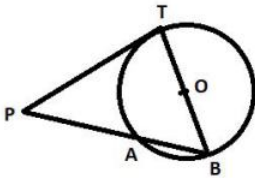
Q.17 When an article is sold for ₹720, there is a profit of  $x\%$ . When the same article is sold for ₹750, profit is  $(x+5)\%$ .

What is the value of  $x$ ?

- Ans
- 1. 20
  - 2. 18
  - 3. 25
  - 4. 15

Question ID : 8161613198  
Status : Answered  
Chosen Option : 1

Q.18 In the given figure, TB is a chord which passes through the centre of the circle. PT is a tangent to the circle at the point T on the circle. If  $PT = 10$  cm,  $PA = 5$  cm and  $AB = x$  cm, then the radius of the circle is:



- Ans
- 1.  $5\sqrt{3}$  cm
  - 2.  $6\sqrt{5}$  cm
  - 3.  $3\sqrt{5}$  cm
  - 4.  $10\sqrt{3}$  cm

Question ID : 8161613202  
Status : Answered  
Chosen Option : 1

Q.19  $\triangle ABC$  is an isosceles triangle with  $AB = AC = 13$  cm. AD is the median on BC from A such that  $AD = 12$  cm. The length of BC is equal to:

- Ans
- 1. 5 cm
  - 2. 7.5 cm
  - 3. 10 cm
  - 4. 6 cm

Question ID : 8161613203  
Status : Answered  
Chosen Option : 3



Q.20 If  $\frac{\cos A}{\operatorname{cosec} A + 1} + \frac{\cos A}{\operatorname{cosec} A - 1} = 2, 0^\circ \leq A \leq 90^\circ$ , then A is equal to:

- Ans
- 1.  $60^\circ$
  - 2.  $45^\circ$
  - 3.  $90^\circ$
  - 4.  $30^\circ$

Question ID : 8161613212

Status : Not Attempted and Marked For Review

Chosen Option : --

Q.21 A discount of 30% on the marked price of a book enables Arun to get a pen worth ₹ 60 free. How much did Arun pay for the book?

- Ans
- 1. ₹140
  - 2. ₹160
  - 3. ₹150
  - 4. ₹130

Question ID : 8161613196

Status : Answered

Chosen Option : 1

Q.22 The value of  $\frac{\frac{1}{5} \div \frac{1}{5} \times \frac{1}{5}}{\frac{1}{5} \div \frac{1}{5} \text{ of } \frac{1}{5}} - 4\frac{1}{5} \div 105$  is:

- Ans
- 1. 0
  - 2. 2
  - 3. 10
  - 4. 5

Question ID : 8161613209

Status : Answered

Chosen Option : 1

Q.23 A sum of money amounts to ₹7,500 in 5 years, and to ₹8,500 in 7 years at simple interest at the same rate of interest. The rate of interest per annum is:

- Ans
- 1. 12%
  - 2. 9%
  - 3. 8%
  - 4. 10%

Question ID : 8161613200

Status : Answered

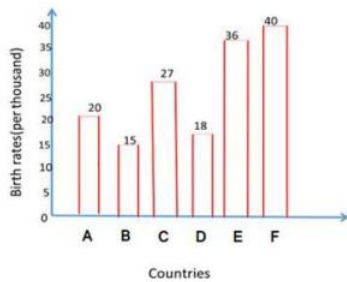
Chosen Option : 4

**Q.24** Bala decided to donate 10% of his salary to PM Care fund. On the day of donation, he changed his mind and donated ₹1,800 which was 60% of what he had decided earlier. How much is his salary?

- Ans**
- 1. ₹36,000
  - 2. ₹32,000
  - 3. ₹30,000
  - 4. ₹40,000

Question ID : **8161613197**  
Status : **Answered**  
Chosen Option : **3**

**Q.25** The following bar chart represents the birth rate (per thousand) of six different countries. Study the bar chart and answer the question given below.



The birth rate of which country is exactly 50% more than that of Country D?

- Ans**
- 1. Country F
  - 2. Country C
  - 3. Country A
  - 4. Country E

Question ID : **8161613213**  
Status : **Answered**  
Chosen Option : **2**

Section : **General Awareness**

**Q.1** Which Indian Institute of Technology launched the country's first indigenously designed standing wheelchair in collaboration with Phoenix Medical Systems?

- Ans**
- 1. IIT Kharagpur
  - 2. IIT Delhi
  - 3. IIT Bombay
  - 4. IIT Madras

Question ID : **8161613223**  
Status : **Answered**  
Chosen Option : **4**

Q.2 The 'Loor dance' is a traditional folk dance, performed only by women, in the state of:

- Ans
- 1. Haryana
  - 2. Madhya Pradesh
  - 3. Punjab
  - 4. Rajasthan

Question ID : 8161613220  
Status : Answered  
Chosen Option : 4

Q.3 What does HLL stand for in computing?

- Ans
- 1. High Low Language
  - 2. Hyper Level Language
  - 3. High Level List
  - 4. High Level Language

Question ID : 8161613217  
Status : Answered  
Chosen Option : 4

Q.4 In which of the following cities was the 4th edition of the India International Cherry Blossom Festival 2019 organised in November 2019?

- Ans
- 1. Shillong
  - 2. Dharamshala
  - 3. Darjeeling
  - 4. Imphal

Question ID : 8161613219  
Status : Answered  
Chosen Option : 2

Q.5 Who among the following was honoured with the prestigious 27th Ekalabya Puraskar for the year 2019?

- Ans
- 1. Jhilli Dalabehera
  - 2. Sneha Soren
  - 3. Saraswati Rout
  - 4. Purnima Hembram

Question ID : 8161613241  
Status : Not Answered  
Chosen Option : --

**Q.6** Lines joining places located at equal travel time from a common centre are called:

- Ans
- 1. isohalines
  - 2. isochrones
  - 3. isonomal
  - 4. isobrongs

Question ID : **8161613232**  
Status : **Answered**  
Chosen Option : **1**

**Q.7** Maps showing natural feature of the earth such as mountains, plateaus, rivers, plains, oceans, etc. are known as \_\_\_\_\_.

- Ans
- 1. Relief Map
  - 2. Topographic Map
  - 3. Political map
  - 4. Thematic Map

Question ID : **8161613229**  
Status : **Answered**  
Chosen Option : **2**

**Q.8** Which state secured the top rank in the Swachh Survekshan Grameen Awards, 2019?

- Ans
- 1. Tamil Nadu
  - 2. Uttar Pradesh
  - 3. Sikkim
  - 4. Madhya Pradesh

Question ID : **8161613221**  
Status : **Answered**  
Chosen Option : **4**

**Q.9** Who among the following cricketers has become the youngest Indian cricketer to score a half-century in international cricket?

- Ans
- 1. Virat Kohli
  - 2. Amita Sharma
  - 3. Shafali Verma
  - 4. Hardik Pandya

Question ID : **8161613240**  
Status : **Answered**  
Chosen Option : **2**

Q.10 Who was conferred with the Italian Golden Sand Art Award, 2019?

- Ans
- 1. Sarvam Patel
  - 2. Vinay Shetty
  - 3. Nitish Bharti
  - 4. Sudarsan Pattnaik

Question ID : 8161613235  
Status : Not Answered  
Chosen Option : --

Q.11 Which India-born businessperson occupied the top spot in Fortune's Businessperson of the Year 2019 list?

- Ans
- 1. Indra Nooyi
  - 2. Satya Nadella
  - 3. Sundar Pichai
  - 4. Chanda Kochhar

Question ID : 8161613224  
Status : Answered  
Chosen Option : 2

Q.12 National Highway 18 does NOT pass through which of the following states?

- Ans
- 1. Bihar
  - 2. West Bengal
  - 3. Odisha
  - 4. Jharkhand

Question ID : 8161613231  
Status : Not Answered  
Chosen Option : --

Q.13 On 14 January 2020, with which Indian bank did the South-Central Railways sign an MoU to implement door-step banking at 585 railway stations?

- Ans
- 1. Punjab National Bank
  - 2. HDFC
  - 3. Syndicate Bank
  - 4. State Bank of India

Question ID : 8161613225  
Status : Not Answered  
Chosen Option : --

Q.14 निम्नलिखित में से कौन सा एक तारामंडल नहीं है?

- Ans  1. रोमन गृह-देवी (Vesta)  
 2. सप्तर्षिमंडल (Ursa Major)  
 3. जलव्याल (Hydra)  
 4. कन्या (Virgo)

Question ID : 8161613230  
Status : Answered  
Chosen Option : 3

Q.15 Who among the following was conferred with the 28th Bihari Puraskar for 2018 for the novel 'Swapnapash', in November 2019?

- Ans  1. Usha Kiran Khan  
 2. Prabhat Ranjan  
 3. Suresh Krishna  
 4. Manisha Kulshreshtha

Question ID : 8161613236  
Status : Not Answered  
Chosen Option : --

Q.16 Who among the following was one of the founders of the Congress Socialist Party?

- Ans  1. C Natarajan Annadurai  
 2. SK Patil  
 3. Atulya Ghosh  
 4. Ram Manohar Lohia

Question ID : 8161613238  
Status : Answered  
Chosen Option : 2

Q.17 Who among the following did Babur defeat in the year 1528 at Chanderi?

- Ans  1. Muhammad Lodhi  
 2. Ibrahim Lodi  
 3. Bappa Rawal  
 4. Medini Rai

Question ID : 8161613233  
Status : Answered  
Chosen Option : 4

Q.18 Which wrestler claimed the second silver medal for India after going down to Japan's Haruna Okuno in the finals of UWW Under-23 World Championships at Budapest in 2019?

- Ans
- 1. Sakshi Malik
  - 2. Pooja Gehlot
  - 3. Kavita Devi
  - 4. Vinesh Phogat

Question ID : 8161613239  
Status : Answered  
Chosen Option : 4

Q.19 Who was the founder of the Ramakrishna Mission?

- Ans
- 1. Debendranath Tagore
  - 2. Atmaram Pandurang
  - 3. Swami Vivekananda
  - 4. Swami Dayanand

Question ID : 8161613234  
Status : Not Answered  
Chosen Option : --

Q.20 The 5th International Film Festival with the theme 'Comedy' was organised by the Culture and Tourism Departments in collaboration with Prayas Production (Mumbai) in which city?

- Ans
- 1. Khajuraho
  - 2. Mumbai
  - 3. Gurugram
  - 4. Puri

Question ID : 8161613222  
Status : Not Answered  
Chosen Option : --

Q.21 Which of the following is NOT a scalar quantity?

- Ans
- 1. Volume
  - 2. Temperature
  - 3. Torque
  - 4. Time

Question ID : 8161613226  
Status : Answered  
Chosen Option : 1

Q.22 Which of the following is NOT unicellular?

- Ans
- 1. Amoeba
  - 2. Spirogyra
  - 3. Plasmodium
  - 4. Paramecium

Question ID : 8161613228  
Status : Answered  
Chosen Option : 4

Q.23 Which of the following viruses is responsible for causing influenza?

- Ans
- 1. Varicella virus
  - 2. Rubeola virus
  - 3. Myxovirus
  - 4. Poliovirus

Question ID : 8161613227  
Status : Answered  
Chosen Option : 1

Q.24 In which of the following countries was the first Electronic Numerical Integrator and Computer, the first programmable general purpose electronic digital computer, developed?

- Ans
- 1. United Kingdom
  - 2. China
  - 3. Japan
  - 4. United States of America

Question ID : 8161613218  
Status : Not Answered  
Chosen Option : --

Q.25 Under which Article of the Indian Constitution are Indian citizens guaranteed the right to six fundamental freedoms?

- Ans
- 1. Article 1
  - 2. Article 31
  - 3. Article 26
  - 4. Article 19

Question ID : 8161613237  
Status : Answered  
Chosen Option : 4





# Latest Sarkari jobs, Govt Exam alerts, Results and Vacancies

- ▶ Latest News and Notification
- ▶ Exam Paper Analysis
- ▶ Topic-wise weightage
- ▶ Previous Year Papers with Answer Key
- ▶ Preparation Strategy & Subject-wise Books

To know more [Click Here](#)



[www.prepp.in](http://www.prepp.in)