



Practice, Learn and Achieve  
Your Goal with Prepp

# DELHI POLICE Exam

Previous Paper

Simplifying  
Government Exams

 SSC CHSL	 IAS EXAM	 RRB NTPC	 NTSE	 CDS
 SSC CGL	 CBSE UGC NET	 IBPS PO	 NDA	
 SBI PO	 IBPS CLERK	 AFCAT	 SSC JE	 CTET
 CSIR UGC NET	 CAPF	 IBPS RRB		

Section : Part A- General Knowledge or Current Affairs

Q.1 As per the Union Budget 2020-21, TDS at the rate of \_\_\_\_ is levied on e-commerce transactions.

- Ans
- 1. 3%
  - 2. 1%
  - 3. 2.5%
  - 4. 0.25%

Question ID : 4244292149  
Status : Not Answered  
Chosen Option : --

Q.2 'Akela' is a fictional character in the children's story book \_\_\_\_.

- Ans
- 1. The Jungle Book
  - 2. The Adventures of Tom Sawyer
  - 3. The Adventures of Huckleberry Finn
  - 4. Alice's Adventures in Wonderland

Question ID : 4244292144  
Status : Answered  
Chosen Option : 1

Q.3 In which of the following years was the Family Courts Act enacted?

- Ans
- 1. 1948
  - 2. 1984
  - 3. 1964
  - 4. 2004

Question ID : 4244292155  
Status : Answered  
Chosen Option : 4

Q.4 The \_\_\_\_\_ in Punjab is held to commemorate the warriors who laid down their lives in the battle between Guru Gobind Singh and the Mughals.

- Ans
- 1. Rauza Sharif Urs
  - 2. Hola Mohalla
  - 3. Maghi Mela
  - 4. Jor Mela

Question ID : 4244292135  
Status : Answered  
Chosen Option : 2

Q.5 The Rohtas Fort is located in present day \_\_\_\_\_.

- Ans
- 1. Nepal
  - 2. Bangladesh
  - 3. Pakistan
  - 4. India

Question ID : 4244292133  
Status : Answered  
Chosen Option : 3

Q.6 By which Constitutional Amendment Act, the voting age of Indian citizens has been reduced from 21 years to 18 years?

- Ans
- 1. Constitution (Sixty-first Amendment) Act, 1988
  - 2. Constitution (Sixty-second Amendment) Act, 1989
  - 3. Constitution (Sixty-fourth Amendment) Act, 1990
  - 4. Constitution (Sixty-third Amendment) Act, 1988

Question ID : 4244292157  
Status : Answered  
Chosen Option : 1

Q.7 The Census of India 2011 was the \_\_\_\_\_ national census after Independence.

- Ans
- 1. seventh
  - 2. ninth
  - 3. eleventh
  - 4. fifteenth

Question ID : 4244292169  
Status : Answered  
Chosen Option : 1

Q.8 Who was the head coach of the Mumbai Indians IPL cricket team in 2019?

- Ans
- 1. Shane Bond
  - 2. James Pamment
  - 3. Robin Singh
  - 4. Mahela Jayawardene

Question ID : 4244292136  
Status : Answered  
Chosen Option : 4

Q.9 Which of the following statements is INCORRECT?

- Ans
- 1. Proteins help build and repair tissues in the human body.
  - 2. Extra fat in the human body is stored under the skin.
  - 3. Deficiency of iodine in the human body causes anaemia.
  - 4. The human body needs minerals in small quantities.

Question ID : 4244292162  
Status : Answered  
Chosen Option : 3

Q.10 A football stadium named after Bhaichung Bhutia has been built near his birthplace in \_\_\_\_\_.

- Ans
- 1. Manipur
  - 2. Sikkim
  - 3. Nagaland
  - 4. Meghalaya

Question ID : 4244292137  
Status : Answered  
Chosen Option : 2

Q.11 Which of the following organisations/agencies does NOT operate a 'Payment Bank' in India as of August 2020?

- Ans
- 1. Fino
  - 2. Wipro
  - 3. India Post
  - 4. Jio

Question ID : 4244292147  
Status : Answered  
Chosen Option : 2

Q.12 Which of the following is the mausoleum of Bahaduddinbhai Hasainbhai in Junagadh?

- Ans
- 1. Chini Ka Rauza
  - 2. Chausath Khamba
  - 3. Gol Gumbaz
  - 4. Mahabat Maqbara

Question ID : 4244292132  
Status : Answered  
Chosen Option : 2

Q.13 The Adichanallur archaeological site is located in the state of \_\_\_\_\_.

- Ans
- 1. Karnataka
  - 2. Tamil Nadu
  - 3. Andhra Pradesh
  - 4. Kerala

Question ID : 4244292174  
Status : Answered  
Chosen Option : 3

Q.14 The \_\_\_\_\_ was/were founded by Sir William Jones in 1784.

- Ans
- 1. Calcutta Madrasas
  - 2. Sanskrit College at Banaras
  - 3. Asiatic Society of Bengal
  - 4. Fort William College

Question ID : 4244292177  
Status : Answered  
Chosen Option : 4

Q.15 Which of the following statements about clayey soil is INCORRECT?

- Ans
- 1. Clayey soil is used to make pots and toys.
  - 2. Clayey soil cannot hold water for long periods.
  - 3. There is very little empty space between particles of clayey soil.
  - 4. Clayey soil is also called fuller's earth.

Question ID : 4244292170  
Status : Answered  
Chosen Option : 2

Q.16 \_\_\_\_\_ is a disease that generally develops in the lungs with symptoms such as fever, cough, chest pain and weight loss.

- Ans
- 1. Malaria
  - 2. Dengue
  - 3. Elephantiasis
  - 4. Tuberculosis

Question ID : 4244292161  
Status : Answered  
Chosen Option : 4

Q.17 Which of the following statements is true?

- Ans
- 1. Tsunamis are rare in the Indian Ocean as compared to the Pacific Ocean.
  - 2. Warm ocean currents carry water from polar or higher latitudes to tropical or lower latitudes.
  - 3. The Burma tectonic plate went under the India tectonic plate causing the tsunami in 2004.
  - 4. Tides are lowest on full moon and new moon days.

Question ID : 4244292171  
Status : Answered  
Chosen Option : 1

Q.18 Who among the following industrialists has served as an MP in the Rajya Sabha?

- Ans
- 1. Azim Premji
  - 2. Gopichand Hinduja
  - 3. Vijay Mallya
  - 4. Adi Godrej

Question ID : 4244292143  
Status : Answered  
Chosen Option : 2

Q.19 Gandhiji requested Indians to observe \_\_\_\_\_ as a day of non-violent opposition to the Rowlatt Act.

- Ans
- 1. 9 August 1920
  - 2. 19 March 1920
  - 3. 26 September 1919
  - 4. 6 April 1919

Question ID : 4244292179  
Status : Answered  
Chosen Option : 2

Q.20 Who among the following cricketers has NEVER received the Rajiv Gandhi Khel Ratna Award?

- Ans
- 1. Virat Kohli
  - 2. Sachin Tendulkar
  - 3. Shikhar Dhawan
  - 4. MS Dhoni

Question ID : 4244292138  
Status : Answered  
Chosen Option : 3

Q.21 Which of the following is a form of music usually associated with Sufism?

- Ans
- 1. Qawwali
  - 2. Thumri
  - 3. Khayal
  - 4. Ghazal

Question ID : 4244292130  
Status : Answered  
Chosen Option : 1

Q.22 Which of the following does NOT form part of the fiscal policy of a country?

- Ans
- 1. Investment or disinvestment strategies
  - 2. Tax policy
  - 3. Supply of money in the economy
  - 4. Debt or surplus management

Question ID : 4244292150  
Status : Answered  
Chosen Option : 4

Q.23 Section 43 of the Motor Vehicles Act, 1988 allows for temporary registration of a vehicle for a period NOT exceeding \_\_\_\_\_.

- Ans
- 1. 6 months
  - 2. 12 months
  - 3. 1 month
  - 4. 2 months

Question ID : 4244292156  
Status : Answered  
Chosen Option : 1

Q.24 Which of the following was NOT an intermediary appointed by the British to collect land revenue from the people of India?

- Ans
- 1. Zamindar
  - 2. Mahalwari
  - 3. Ryotwari
  - 4. Kumaramatya

Question ID : 4244292175  
Status : Answered  
Chosen Option : 4

Q.25 Which of the following is an ancient Indian book on surgery?

- Ans
- 1. Susruta Samhita
  - 2. Arthashastra
  - 3. Manusmriti
  - 4. Charak Samhita

Question ID : 4244292142  
Status : Answered  
Chosen Option : 3

Q.26 In ancient India, the leader of merchant caravans was called \_\_\_\_\_.

- Ans
- 1. Maha-danda-nayaka
  - 2. Sandhi-vigrahika
  - 3. Prathama-kulika
  - 4. Sarthavaha

Question ID : 4244292178  
Status : Answered  
Chosen Option : 1

Q.27 Which Section of the Indian Penal Code deals with punishment for false evidence during judicial proceedings?

- Ans
- 1. 268
  - 2. 193
  - 3. 147
  - 4. 223

Question ID : 4244292158  
Status : Not Answered  
Chosen Option : --



Q.28 Who among the following governors of Goa was the first to take oath in Konkani language?

- Ans
- 1. Satya Pal Malik
  - 2. Bhagat Singh Koshyari
  - 3. Mridula Sinha
  - 4. Margaret Alva

Question ID : 4244292140  
Status : Answered  
Chosen Option : 2

Q.29 Which of the following was a slogan given by Swami Vivekananda?

- Ans
- 1. Give me blood and I will give you freedom
  - 2. Karo Ya Maro
  - 3. Inqilab Zindabad
  - 4. Arise, awake and stop not till the goal is reached

Question ID : 4244292176  
Status : Answered  
Chosen Option : 4

Q.30 The British reversed the partition of Bengal in \_\_\_\_\_.

- Ans
- 1. 1909
  - 2. 1913
  - 3. 1911
  - 4. 1905

Question ID : 4244292173  
Status : Answered  
Chosen Option : 3

Q.31 As per the Union Budget 2020-21, a Super Senior Citizen with net income up to ₹\_\_\_\_\_ is exempt from Income Tax.

- Ans
- 1. 7 lakhs
  - 2. 7.5 lakhs
  - 3. 5 lakhs
  - 4. 5.5 lakhs

Question ID : 4244292148  
Status : Answered  
Chosen Option : 2

Q.32 Bagurumba is a group dance performed by the \_\_\_\_\_ community.

- Ans
- 1. Majhi
  - 2. Bodo
  - 3. Rathawa
  - 4. Varli

Question ID : 4244292134  
Status : Not Answered  
Chosen Option : --

Q.33 As of September 2020, the rate of interest under the Emergency Credit Line Guarantee Scheme (ECLGS) announced by the Government of India is capped at \_\_\_\_\_ for banks and financial institutions.

- Ans
- 1. 6.75%
  - 2. 8.75%
  - 3. 7.25%
  - 4. 9.25%

Question ID : 4244292153  
Status : Answered  
Chosen Option : 3

Q.34 Which of the following statements is INCORRECT?

- Ans
- 1. Chlorofluorocarbons (CFCs) are responsible for decrease in atmospheric ozone.
  - 2. Ozone is a deadly poison.
  - 3. Ozone is a molecule formed by two atoms of oxygen.
  - 4. Ozone shields the surface of Earth from ultraviolet (UV) radiation from the Sun.

Question ID : 4244292160  
Status : Answered  
Chosen Option : 3

Q.35 Chopad (also known as Chaupar or Chausar) was an ancient Indian \_\_\_\_\_.

- Ans
- 1. warfare tactic
  - 2. board game
  - 3. adventure sport
  - 4. weapon

Question ID : 4244292172  
Status : Answered  
Chosen Option : 3

Q.36 \_\_\_\_\_ in India can be classified as rural or urban.

- Ans
- 1. Private commercial banks
  - 2. Public commercial banks
  - 3. Development banks
  - 4. Co-operative banks

Question ID : 4244292146  
Status : Answered  
Chosen Option : 4

Q.37 अंगूर की बेल \_\_\_\_\_ का एक उदाहरण है।

- Ans
- 1. झाड़ी (Shrub)
  - 2. जड़ी बूटी (Herb)
  - 3. विसर्पी (Creeper)
  - 4. आरोही (Climber)

Question ID : 4244292163  
Status : Answered  
Chosen Option : 1

Q.38 Which of the following committees of the Constituent Assembly was NOT chaired by Rajendra Prasad?

- Ans
- 1. Union Powers Committee
  - 2. Committee on the Rules of Procedure
  - 3. Ad hoc Committee on the National Flag
  - 4. Finance and Staff Committee

Question ID : 4244292159  
Status : Answered  
Chosen Option : 3

Q.39 Vini Mahajan was the first female chief secretary of the state of \_\_\_\_\_.

- Ans
- 1. Gujarat
  - 2. Tripura
  - 3. Kerala
  - 4. Punjab

Question ID : 4244292145  
Status : Answered  
Chosen Option : 2

Q.40 The \_\_\_\_\_ temple in Nepal is also known as the 'Monkey Temple'.

- Ans
- 1. Pashupatinath
  - 2. Buddasubba
  - 3. Swayambhunath
  - 4. Barashetra

Question ID : 4244292131  
Status : Not Answered  
Chosen Option : --

Q.41 With which of the following games/sports is R Pragganandhaa associated?

- Ans
- 1. Chess
  - 2. Poker
  - 3. Table tennis
  - 4. Squash

Question ID : 4244292139  
Status : Answered  
Chosen Option : 1

Q.42 'Duns' are longitudinal valleys between the \_\_\_\_\_ and the Shiwaliks.

- Ans
- 1. Greater Himalayas
  - 2. Ganga-Brahmaputra Plains
  - 3. Lesser Himalayas
  - 4. Western Plains

Question ID : 4244292168  
Status : Answered  
Chosen Option : 3

Q.43 What was the most popular source of drinking water, as per the Census of India 2011, reported by more than 41% households?

- Ans
- 1. River
  - 2. Tap
  - 3. Well
  - 4. Hand pump / Tube well

Question ID : 4244292164  
Status : Answered  
Chosen Option : 1

Q.44 Which of the following cities lies on the banks of the river Brahmaputra?

- Ans
- 1. Cuttack
  - 2. Guwahati
  - 3. Patna
  - 4. Delhi

Question ID : 4244292167  
Status : Answered  
Chosen Option : 2

Q.45 Which of the following statements is true?

- Ans
- 1. The Himalayan Mountains lie to the south-east of India.
  - 2. Bay of Bengal lies to the north-west of India.
  - 3. Arabian Sea lies to the south-west of India.
  - 4. The Indian Ocean lies to the north-east of India.

Question ID : 4244292166  
Status : Answered  
Chosen Option : 3

Q.46 As per the Macro-Economic Framework Statement 2020-21, milk production in India grew \_\_\_\_\_ in 2018-19 over the previous year.

- Ans
- 1. 6.50%
  - 2. 0.50%
  - 3. 2.50%
  - 4. 10.50%

Question ID : 4244292152  
Status : Not Answered  
Chosen Option : --

Q.47 As of September 2020, which of the following is the most recent award given to film actress Kangana Ranaut?

- Ans
- 1. IIFA Award for Best Actress
  - 2. National Film Award for Best Actress
  - 3. Padma Shri
  - 4. CNN-IBN Indian of the Year Special Achievement

Question ID : 4244292141  
Status : Answered  
Chosen Option : 3

Q.48 Unregulated Deposit Schemes were banned in India by the 'Banning of Unregulated Deposit Schemes Act, \_\_\_\_\_'.

- Ans
- 1. 2016
  - 2. 2018
  - 3. 2019
  - 4. 2017

Question ID : 4244292154  
Status : Not Answered  
Chosen Option : --

Q.49 The *Ficus religiosa* is commonly known as the \_\_\_\_\_ tree in India.

- Ans
- 1. Babool
  - 2. Sal
  - 3. Peepal
  - 4. Neem

Question ID : 4244292165  
Status : Answered  
Chosen Option : 3

Q.50 The inaugural train under the 'Kisan Rail' scheme announced in the Union Budget 2020-21 ran between \_\_\_\_\_.

- Ans
- 1. Bihar and Telangana
  - 2. Maharashtra and Bihar
  - 3. Chhattisgarh and Karnataka
  - 4. Karnataka and Maharashtra

Question ID : 4244292151  
Status : Answered  
Chosen Option : 2

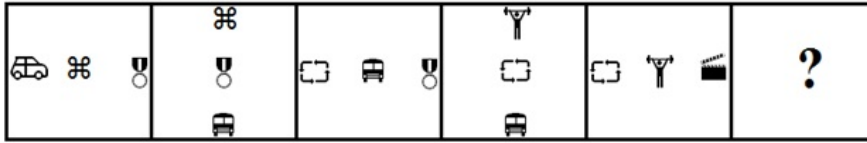
Section : Part B- Reasoning

Q.1 दिए गए चार शब्दों में से तीन में एक निश्चित प्रकार की समानता है और एक असंगत है। उस असंगत विकल्प का चयन करें।

- Ans
- 1. दौरा (Seizure)
  - 2. ऐंठन (Convulsion)
  - 3. प्रशांति (Calm)
  - 4. संकुचन (Cramp)

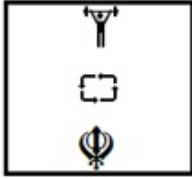
Question ID : 4244292181  
Status : Answered  
Chosen Option : 3

Q.2 Which figure will replace the question mark (?) in the following figure series?

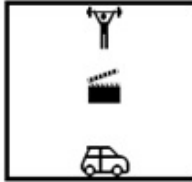


Ans

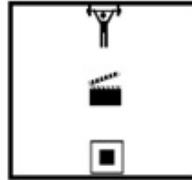
X 1.



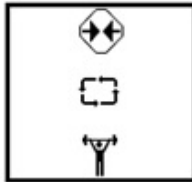
X 2.



✓ 3.



X 4.



Question ID : 4244292193

Status : Answered

Chosen Option : 4

Q.3 The difference between simple interest and compound interest on a certain sum of money for 2 years at 10% per annum is ₹732. Find the sum.

Ans X 1. ₹72,300

X 2. ₹70,320

✓ 3. ₹73,200

X 4. ₹70,230

Question ID : 4244292188

Status : Answered

Chosen Option : 3

**Q.4** Select the set in which the numbers are related in the same way as are the numbers of the following set.

(4, 19, 41)

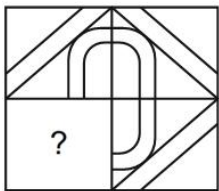
- Ans** ✓ 1. (8, 67, 137)  
✗ 2. (5, 22, 47)  
✗ 3. (11, 124, 215)  
✗ 4. (6, 39, 75)

Question ID : 4244292186

Status : Answered

Chosen Option : 2

**Q.5** Select the option figure that can replace the question mark (?) in the given figure to complete the pattern.



**Ans**

- ✓ 1.
- ✗ 2.
- ✗ 3.
- ✗ 4.

Question ID : 4244292196

Status : Answered

Chosen Option : 1


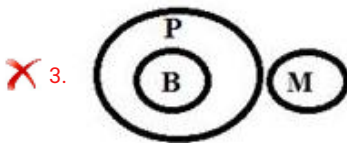
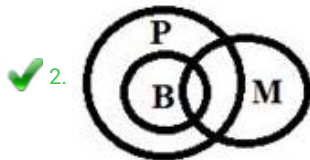
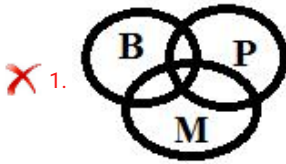


**Q.6** Read the below statements disregarding commonly known facts, and then from the given four options, identify the Venn diagram that correctly represents the statements.

Statements:

- 1) Some Markers (M) are Boards (B).
- 2) All the Boards (B) are Printers (P).

Ans

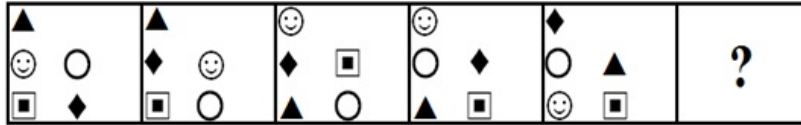


Question ID : 4244292204


Status : Answered

Chosen Option : 2

Q.7 Which figure will replace the question mark (?) in the following figure series?



Ans



Question ID : 4244292194  
 Status : Answered  
 Chosen Option : 3

Q.8 If SEIZURE is coded as 8231592 and HARMONY is coded as 1919144132, then how will PRODUCE be coded?

- Ans
- ✓ 1. 1194235242
  - ✗ 2. 11122234569
  - ✗ 3. 11912236245
  - ✗ 4. 1194232425

Question ID : 4244292182  
 Status : Answered  
 Chosen Option : 1

Q.9 Which number will replace the question mark (?) in the following series?

1, 5, 10, 27, 58, 153, 340, ?

- Ans
- 1. 803
  - 2. 830
  - 3. 903
  - 4. 930

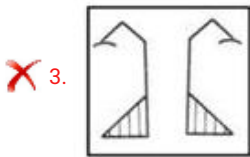
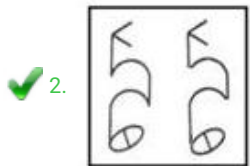
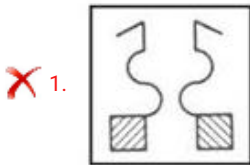
Question ID : 4244292183

Status : **Not Attempted and Marked For Review**

Chosen Option : --

Q.10 Three of the following four figures are alike in a certain way and one is different. Select the odd one.

Ans



Question ID : 4244292190

Status : **Answered**

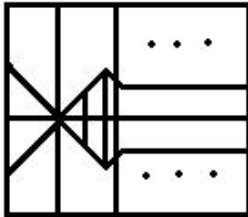
Chosen Option : 2

Q.11 Select the option in which the given figure is embedded (rotation is NOT allowed).

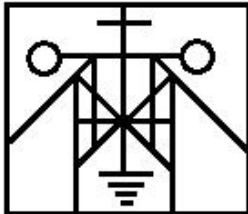


Ans

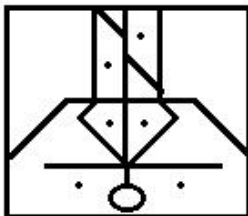
✗ 1.



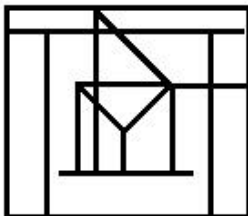
✓ 2.



✗ 3.



✗ 4.

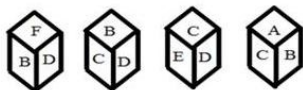


Question ID : 4244292199

Status : Answered

Chosen Option : 2

Q.12 Four different positions of the same dice are shown. Select the letter on the face opposite to the face showing 'B'.



Ans

✓ 1. E

✗ 2. F

✗ 3. D

✗ 4. C

Question ID : 4244292201

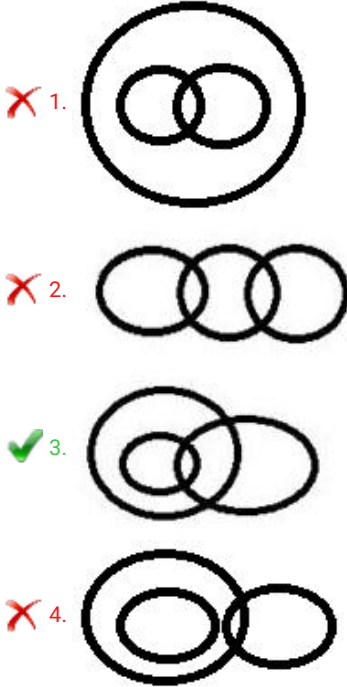
Status : Answered

Chosen Option : 1

**Q.13** Select the Venn diagram that best illustrates the relationship between the following classes.

Men, Pharmacists, Brothers

Ans



Question ID : 4244292203  
Status : Answered  
Chosen Option : 3

**Q.14** Select the option that is related to the third number in the same way as the second number is related to the first number.

15 : 90 :: 18 : ?

- Ans  1. 126  
 2. 146  
 3. 164  
 4. 261

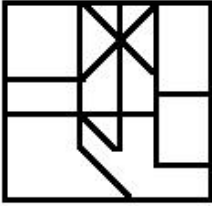
Question ID : 4244292185  
Status : Answered  
Chosen Option : 1

Q.15 Select the option in which the given figure is embedded (rotation is NOT allowed).

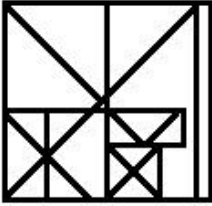


Ans

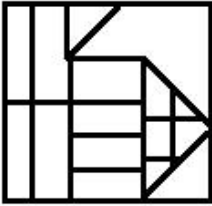
✗ 1.



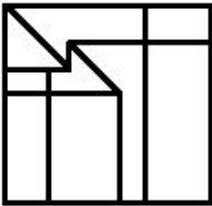
✓ 2.



✗ 3.



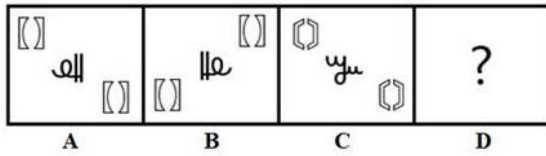
✗ 4.



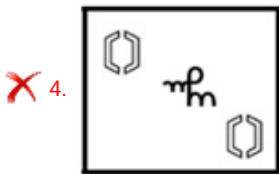
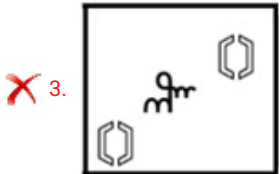
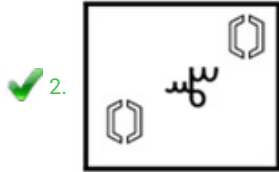
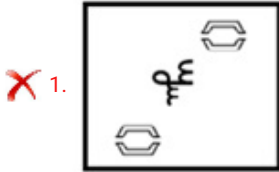
Prepp

Question ID : 4244292200  
Status : Answered  
Chosen Option : 1

Q.16 Select the option that is related to figure C in the same way as figure B is related to figure A.

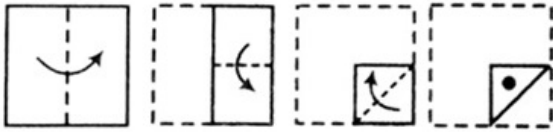


Ans

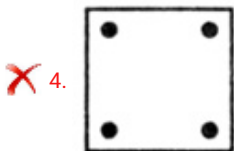
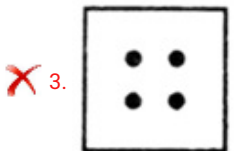
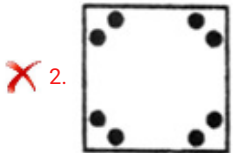
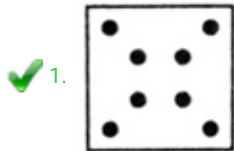


Question ID : 4244292191  
 Status : Answered  
 Chosen Option : 2

Q.17 A paper is folded and cut as shown below. How will it appear when unfolded?



Ans



Question ID : 4244292198  
Status : Answered  
Chosen Option : 1

Q.18 Which number will replace the question mark (?) in the following series?

3, 7, 18, 40, 75, 127, 198, 292, 415, 569, ?

- Ans
- ✗ 1. 706
  - ✗ 2. 860
  - ✗ 3. 806
  - ✓ 4. 760

Question ID : 4244292184  
Status : Answered  
Chosen Option : 2



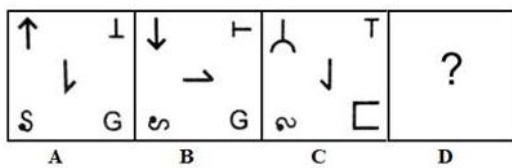
Q.19 Select the option that is related to the third word in the same way as the second word is related to the first word.

Insects : Entomology :: Rocks : ?

- Ans
- 1. Topology
  - 2. Lithology
  - 3. Cytology
  - 4. Odontology

Question ID : 4244292180  
 Status : Answered  
 Chosen Option : 2

Q.20 Select the option that is related to figure C in the same way as figure B is related to figure A.



Ans

- 1.
- 2.
- 3.
- 4.

Question ID : 4244292192  
 Status : Answered  
 Chosen Option : 4

**Q.21** Select the correct mirror image of the given combination when the mirror is placed to the right side of it.

PRODUCTION

Ans

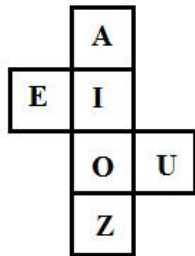
- ✗ 1. ꞑꞗꞗꞗꞗꞗꞗ
- ✗ 2. ꞑꞗꞗꞗꞗꞗꞗ
- ✓ 3. ꞑꞗꞗꞗꞗꞗꞗ
- ✗ 4. ꞑꞗꞗꞗꞗꞗꞗ

Question ID : 4244292197

Status : Answered

Chosen Option : 3

**Q.22** If the given figure is folded to form a cube, which letter will come opposite to 'E'?



Ans

- ✓ 1. U
- ✗ 2. A
- ✗ 3. Z
- ✗ 4. O

Question ID : 4244292202

Status : Answered

Chosen Option : 1

**Q.23** Three of the following four figures are alike in a certain way and one is different. Select the odd one.

**Ans**

1.



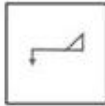
2.



3.



4.



Question ID : 4244292189

Status : Answered

Chosen Option : 4

**Q.24** Which two signs should be interchanged to make the given equation correct?

$$176 - 16 + 33 \times 6 \div 200 = 9$$

**Ans**

1. + and  $\div$

2. - and  $\div$

3.  $\div$  and  $\times$

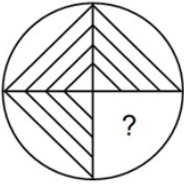
4. + and  $\times$

Question ID : 4244292187

Status : Answered

Chosen Option : 2

Q.25 Select the option figure that can replace the question mark (?) in the given figure to complete the pattern.



Ans


✗ 1.



✗ 2.



✓ 3.



✗ 4.



Question ID : 4244292195

Status : Answered

Chosen Option : 3

Section : Part C- Numerical Ability

Q.1 A loan is to be returned in two equal annual instalments. If the rate of interest is 10% p.a., compounded yearly, and each instalment is ₹3,872, then the total interest charged in this instalment scheme is:

Ans

✓ 1. ₹1,024

✗ 2. ₹1,020

✗ 3. ₹980

✗ 4. ₹1,050

Question ID : 4244292215

Status : Not Attempted and Marked For Review

Chosen Option : --

**Q.2** A and B started simultaneously towards each other from places X and Y, respectively. After meeting at point M on the way, A and B took 3.2 hours and 7.2 hours, to reach Y and X, respectively. The time (in hours) taken by them to reach point M was:

- Ans**
- 1. 4.8
  - 2. 5
  - 3. 4
  - 4. 5.2

Question ID : 4244292217  
Status : Answered  
Chosen Option : 3

**Q.3** The average of 14 numbers is 73.5. If two numbers 60 and 63 are replaced by 58 and 70 and one more number  $x$  is included, then the average of the numbers now increases by 1.5. What is the value of  $x$  ?

- Ans**
- 1. 91
  - 2. 85
  - 3. 88
  - 4. 82

Question ID : 4244292207  
Status : Answered  
Chosen Option : 1

**Q.4** The income of A is 60% more than the income of B, and the income of C is 45% less than the total income of A and B. By what percentage is C's income less than that of A's?

- Ans**
- 1. 11.225
  - 2. 11.88
  - 3. 10.5
  - 4. 10.625

Question ID : 4244292209  
Status : Answered  
Chosen Option : 4

**Q.5** A certain number of students from school A appeared in an examination and 65% of them passed. 100% more students than those in school A, appeared in the same examination from school B. If 75% of the total students that appeared from schools A and B passed, then what is the percentage of students who failed from school B?

- Ans**
- 1. 25
  - 2. 20
  - 3. 18
  - 4. 15

Question ID : 4244292210  
Status : Answered  
Chosen Option : 2

**Q.6** The rate of interest on a sum for the first 3 years is 8% p.a., for the next 4 years it is 10% p.a., and for the period beyond 7 years it is 16% p.a. If a person gets ₹11,340 as simple interest after 10 years, how much money did he invest?

- Ans**
- 1. ₹11,150
  - 2. ₹12,140
  - 3. ₹10,140
  - 4. ₹10,125

Question ID : 4244292214  
Status : Answered  
Chosen Option : 4

**Q.7** The curved surface area of a right circular cylinder is  $1320 \text{ cm}^2$  and the radius of its base is 10.5 cm. The volume (in  $\text{cm}^3$ ) of the cylinder is: (Take  $\pi = \frac{22}{7}$ )

- Ans**
- 1. 6930
  - 2. 6908
  - 3. 6798
  - 4. 6732

Question ID : 4244292219  
Status : Answered  
Chosen Option : 1

**Q.8** A sum of ₹16,380 is divided among A, B, C, and D such that the ratio of the shares of A and B is 1 : 3, that of B and C is 2 : 5, and that of C and D is 2 : 3. The share (in ₹) of C is:

- Ans**
- 1. 5,400
  - 2. 8,100
  - 3. 6,300
  - 4. 4,500

Question ID : 4244292213  
Status : Answered  
Chosen Option : 1

**Q.9** Let  $x$  be the least number of 4-digits which when divided by 12, 15, 20 and 27 leaves, in each case, a remainder 7. What is the sum of the digits of  $x$  ?

- Ans**
- 1. 13
  - 2. 16
  - 3. 17
  - 4. 11

Question ID : 4244292205  
Status : Answered  
Chosen Option : 2

Q.10 The value of  $(0.5\bar{8} \div 0.\overline{53}) \times \frac{5}{33} + \frac{10}{21} \div 1\frac{1}{14}$  of  $\frac{5}{3} - \frac{5}{3} \times \frac{1}{10}$  is:

- Ans
- 1.  $\frac{13}{30}$
  - 2.  $\frac{3}{5}$
  - 3.  $\frac{3}{10}$
  - 4.  $\frac{4}{15}$

Question ID : 4244292208

Status : Answered

Chosen Option : 3

Q.11 The marked price of an article is ₹240. It is sold by giving a discount of 10% on the marked price. If the profit is 8%, then what is the cost price of the article?

- Ans
- 1. ₹175
  - 2. ₹210
  - 3. ₹180
  - 4. ₹200

Question ID : 4244292211

Status : Answered

Chosen Option : 4

Q.12 A and B can do a piece of work in 10 days and 15 days, respectively. They work together for 4 days. The remaining work is completed by C alone in 12 days. C alone will complete  $\frac{4}{9}$  part of the original work in:

- Ans
- 1. 24 days
  - 2. 12 days
  - 3. 20 days
  - 4. 16 days

Question ID : 4244292216

Status : Answered

Chosen Option : 4

**Q.13** Roshan bought 36 kg sugar for ₹1,620. He sold it at a profit equal to the selling price of 6 kg of it. His selling price per kg, is:

- Ans
- 1. ₹51
  - 2. ₹50
  - 3. ₹54
  - 4. ₹52

Question ID : 4244292212

Status : Answered

Chosen Option : 3

**Q.14** In a division sum, the divisor is 18 times the quotient and 9 times the remainder. If the remainder is 26, then the dividend is:

- Ans
- 1. 3055
  - 2. 3072
  - 3. 3068
  - 4. 3042

Question ID : 4244292206

Status : Answered

Chosen Option : 3

**Q.15** The perimeter of a rhombus is 148 cm and one of its diagonals is 70 cm. Its area is equal to the area of a rectangle whose sides are in the ratio 7 : 3. The longer side of the rectangle is:

- Ans
- 1.  $7\sqrt{10}$  cm
  - 2.  $8\sqrt{5}$  cm
  - 3.  $4\sqrt{5}$  cm
  - 4.  $14\sqrt{10}$  cm

Question ID : 4244292218

Status : Answered

Chosen Option : 4

Section : Part D- Computer Proficiency

**Q.1** Which of the following keyboard shortcuts is used to activate a browser tab to the left of the current tab in a Chrome browser?

- Ans
- 1. Ctrl + Page up
  - 2. Alt + Page down
  - 3. Alt + Left arrow
  - 4. Ctrl + Right arrow

Question ID : 4244292229

Status : Answered

Chosen Option : 3



Q.2 What will be the result of the following MS Excel formula?

=EVEN(3) + ODD(8)

- Ans
- 1. 9
  - 2. 14
  - 3. 13
  - 4. 11

Question ID : 4244292222  
Status : Not Answered  
Chosen Option : --

Q.3 Consider a formula "=B2+4" in cell A1. If cell A1 is copied and pasted into D4, then what will be the formula in D4?

- Ans
- 1. =B4+7
  - 2. =D4+4
  - 3. =E5+4
  - 4. =B2+4

Question ID : 4244292221  
Status : Answered  
Chosen Option : 2

Q.4 In MS Excel, the 'Zoom' option appears in the:

- Ans
- 1. title bar
  - 2. formula bar
  - 3. status bar
  - 4. horizontal scroll bar

Question ID : 4244292220  
Status : Answered  
Chosen Option : 3

Q.5 Which of the following appears as a part of the 'Paragraph' command group within the Home menu in recent versions of MS Word, such as Word 2016?

- Ans
- 1. Copy
  - 2. Replace
  - 3. Bullets
  - 4. Format Painter

Question ID : 4244292223  
Status : Answered  
Chosen Option : 3

Q.6 State whether the following statements related to MS Word are true or false?

(i) In Landscape orientation, the height of a page is larger than its width.

(ii) In Portrait orientation, the width of a page is larger than its height.

- Ans
- 1. (i) True, (ii) False
  - 2. (i) False, (ii) False
  - 3. (i) False, (ii) True
  - 4. (i) True, (ii) True

Question ID : 4244292226

Status : Answered

Chosen Option : 2

Q.7 Which of the following keyboard shortcuts can be used to insert a hyperlink in an MS Word document?

- Ans
- 1. Alt + K
  - 2. Alt + L
  - 3. Ctrl + K
  - 4. Ctrl + L

Question ID : 4244292225

Status : Answered

Chosen Option : 4

Q.8 Which of the following notations is generally used to represent an IP address in an understandable format?

- Ans
- 1. Binary notation
  - 2. Hexadecimal notation
  - 3. Octal notation
  - 4. Dotted-decimal notation

Question ID : 4244292228

Status : Answered

Chosen Option : 2

Q.9 While printing an MS Word document, we can set the number of copies to be printed. By default, you will have \_\_\_\_\_ copy/copies of the document.

- Ans
- 1. one
  - 2. two
  - 3. three
  - 4. eight

Question ID : 4244292224

Status : Answered

Chosen Option : 1

Q.10 Which of the following protocols pulls messages from the email server?

- Ans
- 1. HTTP
  - 2. POP
  - 3. SMTP
  - 4. Both, SMTP and POP

Question ID : 4244292227  
Status : Answered  
Chosen Option : 4

Prepp



# Latest Sarkari jobs, Govt Exam alerts, Results and Vacancies

- ▶ Latest News and Notification
- ▶ Exam Paper Analysis
- ▶ Topic-wise weightage
- ▶ Previous Year Papers with Answer Key
- ▶ Preparation Strategy & Subject-wise Books

To know more [Click Here](#)



[www.prepp.in](http://www.prepp.in)