

















Practice, Learn and Achieve  
Your Goal with Prepp

# SSC CHSL Exam

Tier I Previous Paper

Simplifying  
Government Exams

 SSC CHSL	 IAS EXAM	 RRB NTPC	 NTSE	 CDS
 SSC CGL	 CBSE UGC NET	 IBPS PO	 NDA	
 SBI PO	 IBPS CLERK	 AFCAT	 SSC JE	 CTET
 CSIR UGC NET	 CAPF	 IBPS RRB		

[www.prepp.in](http://www.prepp.in)

## Combined Higher Secondary Level Examination 2019 Tier I

Roll Number	4410274097
Candidate Name	PRASAD MUKHERJEE
Venue Name	HDSM INFOTECH RAJARHAT
Exam Date	13/10/2020
Exam Time	4:00 PM - 5:00 PM
Subject	CHSL Tier 1

Section : English Language (Basic Knowledge)

**Q.1 Select the correctly spelt word.**

- Ans
- 1. Restaurent
  - 2. Memmoir
  - 3. Business
  - 4. Stuidiuos

Question ID : 8161612250  
Status : Answered  
Chosen Option : 3

**Q.2 Select the synonym of the given word.**

Nebulous

- Ans
- 1. Faith
  - 2. Stable
  - 3. Dearly
  - 4. Vague

Question ID : 8161612255  
Status : Answered  
Chosen Option : 2

**Q.3 Select the most appropriate ANTONYM of the given word.**

METROPOLITAN

- Ans
- 1. Federal
  - 2. National
  - 3. Provincial
  - 4. Insular

Question ID : 8161612247  
Status : Answered  
Chosen Option : 3

**Q.4** Select the most appropriate option to fill in the blank in the given sentence.

A \_\_\_\_\_ of small stones is called a mosaic.

- Ans
- 1. structure
  - 2. mound
  - 3. pattern
  - 4. design

Question ID : 8161612257  
Status : Answered  
Chosen Option : 3

**Comprehension:**

In the following passage some words have been deleted. Fill in the blanks with the help of the alternatives given. Select the most appropriate option for each blank.

A city, predominantly made of red sandstone, Fatehpur Sikri (1)\_\_\_\_\_ founded in the 16th century by the Mughal Emperor, Akbar. It is essentially a fortified city (2)\_\_\_\_\_ had been the capital of Akbar (3)\_\_\_\_\_ fifteen years. Now a UNESCO world heritage site (4)\_\_\_\_\_ a famous tourist attraction, it is a fine (5)\_\_\_\_\_ of Mughal architecture.

**SubQuestion No : 5**

**Q.5** Select the most appropriate option to fill in blank number 1.

- Ans
- 1. was
  - 2. had
  - 3. were
  - 4. is

Question ID : 8161612237  
Status : Answered  
Chosen Option : 1

**Comprehension:**

In the following passage some words have been deleted. Fill in the blanks with the help of the alternatives given. Select the most appropriate option for each blank.

A city, predominantly made of red sandstone, Fatehpur Sikri (1)\_\_\_\_\_ founded in the 16th century by the Mughal Emperor, Akbar. It is essentially a fortified city (2)\_\_\_\_\_ had been the capital of Akbar (3)\_\_\_\_\_ fifteen years. Now a UNESCO world heritage site (4)\_\_\_\_\_ a famous tourist attraction, it is a fine (5)\_\_\_\_\_ of Mughal architecture.

**SubQuestion No : 6**

**Q.6** Select the most appropriate option to fill in blank number 2.

- Ans
- 1. which
  - 2. where
  - 3. what
  - 4. who

Question ID : 8161612238  
Status : Answered  
Chosen Option : 1

**Comprehension:**

In the following passage some words have been deleted. Fill in the blanks with the help of the alternatives given. Select the most appropriate option for each blank.

A city, predominantly made of red sandstone, Fatehpur Sikri (1)\_\_\_\_\_ founded in the 16th century by the Mughal Emperor, Akbar. It is essentially a fortified city (2)\_\_\_\_\_ had been the capital of Akbar (3)\_\_\_\_\_ fifteen years. Now a UNESCO world heritage site (4)\_\_\_\_\_ a famous tourist attraction, it is a fine (5)\_\_\_\_\_ of Mughal architecture.

**SubQuestion No : 7**

**Q.7 Select the most appropriate option to fill in blank number 3.**

- Ans
- 1. by
  - 2. since
  - 3. for
  - 4. from

Question ID : 8161612239

Status : Answered

Chosen Option : 3

**Comprehension:**

In the following passage some words have been deleted. Fill in the blanks with the help of the alternatives given. Select the most appropriate option for each blank.

A city, predominantly made of red sandstone, Fatehpur Sikri (1)\_\_\_\_\_ founded in the 16th century by the Mughal Emperor, Akbar. It is essentially a fortified city (2)\_\_\_\_\_ had been the capital of Akbar (3)\_\_\_\_\_ fifteen years. Now a UNESCO world heritage site (4)\_\_\_\_\_ a famous tourist attraction, it is a fine (5)\_\_\_\_\_ of Mughal architecture.

**SubQuestion No : 8**

**Q.8 Select the most appropriate option to fill in blank number 4.**

- Ans
- 1. and
  - 2. but
  - 3. nor
  - 4. if

Question ID : 8161612240

Status : Answered

Chosen Option : 1

**Comprehension:**

In the following passage some words have been deleted. Fill in the blanks with the help of the alternatives given. Select the most appropriate option for each blank.

A city, predominantly made of red sandstone, Fatehpur Sikri (1)\_\_\_\_\_ founded in the 16th century by the Mughal Emperor, Akbar. It is essentially a fortified city (2)\_\_\_\_\_ had been the capital of Akbar (3)\_\_\_\_\_ fifteen years. Now a UNESCO world heritage site (4)\_\_\_\_\_ a famous tourist attraction, it is a fine (5)\_\_\_\_\_ of Mughal architecture.

**SubQuestion No : 9**

**Q.9 Select the most appropriate option to fill in blank number 5.**

- Ans
- 1. example
  - 2. ruin
  - 3. infrastructure
  - 4. organization

Question ID : 8161612241

Status : Answered

Q.10 Given below are four jumbled sentences. Select the option that gives their correct order.

- A. They grew cabbages and carrots in their back yard.
- B. The family was very poor and was always hungry because there was a war on.
- C. They also had a chicken, which provided the family with eggs, but still they were hungry.
- D. Their country had been invaded by a foreign army.

- Ans
- 1. DABC
  - 2. CADB
  - 3. CDAB
  - 4. BDAC

Question ID : 8161612242  
Status : Answered  
Chosen Option : 4

Q.11 Select the most appropriate option to substitute the underlined segment in the given sentence. If there is no need to substitute it, select No improvement.

Since it falls on the floor, her dog, a black Labrador, gulped the biscuit down.

- Ans
- 1. Since it fell
  - 2. Because it is falling
  - 3. As it have fallen
  - 4. No improvement

Question ID : 8161612245  
Status : Answered  
Chosen Option : 1

Q.12 Select the option that is the passive form of the given sentence.

The police brought a search warrant when they raided his house.

- Ans
- 1. A search warrant had been brought when the police raided his house.
  - 2. The police had raided his house and brought a search warrant.
  - 3. A search warrant was brought by the police when they raided his house.
  - 4. A search warrant was brought when they raided his house by the police.

Question ID : 8161612232  
Status : Answered  
Chosen Option : 3

Q.13 Select the most appropriate ANTONYM of the given word.

INSTANT

- Ans
- 1. Similar
  - 2. Gradual
  - 3. Prompt
  - 4. Diverse

Question ID : 8161612246  
Status : Answered  
Chosen Option : 2

Q.14 Select the word which means the same as the group of words given.

Tending to associate with others of one's kind

- Ans
- 1. Genial
  - 2. Congruous
  - 3. Harmonious
  - 4. Gregarious

Question ID : 8161612253  
Status : Answered  
Chosen Option : 2

Q.15 Select the most appropriate option to substitute the underlined segment in the given sentence. If there is no need to substitute it, select No improvement.

This is a class who is expected to do exceptionally well in the quiz next week.

- Ans
- 1. which is expected to do
  - 2. No improvement
  - 3. that is expecting to done
  - 4. which are expecting to be doing

Question ID : 8161612244  
Status : Answered  
Chosen Option : 1

Q.16 Select the most appropriate option to fill in the blank in the given sentence.

The performances of the notable dancers and guest artists \_\_\_\_\_ the audience.

- Ans
- 1. occupied
  - 2. absorbed
  - 3. immersed
  - 4. enthralled

Question ID : 8161612256  
Status : Answered  
Chosen Option : 4

Q.17 Select the word which means the same as the group of words given.

Lasting for a very short time

- Ans
- 1. Endless
  - 2. Illusory
  - 3. Ephemeral
  - 4. Infinite

Question ID : 8161612252  
Status : Answered  
Chosen Option : 3

Q.18 Select the most appropriate synonym of the given word.

RIND

- Ans  1. Peel  
 2. Petal  
 3. Leaf  
 4. Shade

Question ID : 8161612254  
Status : Not Answered  
Chosen Option : --

Q.19 Select the INCORRECTLY spelt word.

- Ans  1. Inclusion  
 2. Excess  
 3. Discriminatory  
 4. Supporters

Question ID : 8161612251  
Status : Answered  
Chosen Option : 4

Q.20 Identify the segment in the given sentence which contains the grammatical error.

Most of voters in Taiwan seem to have once again voted for the democratic party and President Tsai Ing-wen.

- Ans  1. once again voted for  
 2. the democratic party  
 3. in Taiwan seem to have  
 4. Most of voters

Question ID : 8161612235  
Status : Answered  
Chosen Option : 3

Q.21 Select the option that is the direct form of the given sentence.

Nidhi exclaimed that it was a beautiful painting.

- Ans  1. Nidhi said to the artist in surprise, "How beautiful you made that painting!"  
 2. Nidhi exclaimed, "What a beautiful painting!"  
 3. Nidhi told him in wonder, "How beautiful!"  
 4. Nidhi said to the artist, "That looks like a beautiful painting!"

Question ID : 8161612233  
Status : Answered  
Chosen Option : 2

Q.22 Identify the segment in the given sentence which contains the grammatical error.

We noticed that most of the shoppers in the mall looking for packets of ready to cook food.

- Ans
- 1. packets of ready to cook food
  - 2. most of the shoppers
  - 3. in the mall looking for
  - 4. We noticed that

Question ID : 8161612234  
Status : Answered  
Chosen Option : 3

Q.23 Select the most appropriate meaning of the underlined idiom in the given sentence.

Akshay is likely to take the heat for having miscalculated the expenses.

- Ans
- 1. scold everyone
  - 2. receive criticism
  - 3. feel very hot
  - 4. enjoy warm climate

Question ID : 8161612248  
Status : Answered  
Chosen Option : 2

Q.24 Select the most appropriate meaning of the idiom.

To have a gut feeling

- Ans
- 1. To suffer from inflammation
  - 2. To feel an instinct or intuition
  - 3. To experience discomfort
  - 4. To have pain in the abdomen

Question ID : 8161612249  
Status : Answered  
Chosen Option : 2

Q.25 Given below are four jumbled sentences. Select the option that gives their correct order.

- A. I sow a seed.
- B. I saw the sapling.
- C. I saw the sprout.
- D. I saw the plant.

- Ans
- 1. ACBD
  - 2. DBAC
  - 3. CABD
  - 4. ABCD

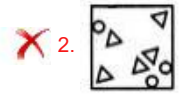
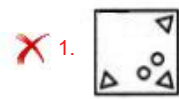
Question ID : 8161612243  
Status : Answered  
Chosen Option : 1



**Q.1** The sequence of folding a piece of paper and the manner in which the folded paper has been cut is shown in the following figures. How would this paper look when unfolded?



**Ans**



Question ID : 8161612280

Status : **Answered**

Chosen Option : 3

Q.2 Select the correct mirror image of the given figure when the mirror is placed to the right side of the figure.



Ans

✗ 1.




✓ 2.



✗ 3.



✗ 4.



Question ID : 8161612281

Status : Answered

Chosen Option : 2

Q.3 Four letter-clusters have been given, out of which three are alike in some manner and one is different. Select the one that is different.

Ans

✗ 1. ADGPI

✗ 2. ECVMU

✗ 3. OMKLU

✓ 4. VDCKA

Question ID : 8161612273

Status : Marked For Review

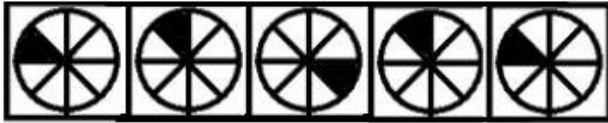
Chosen Option : 1

**Q.4** In a certain code language, KNOWLEDGE is written as DEEGKLNOW. How will SERIAL be written as in the same language?

- Ans**
- 1. AEILRS
  - 2. AELIRS
  - 3. AEILRM
  - 4. AEIRLM

Question ID : 8161612266  
Status : Answered  
Chosen Option : 1

**Q.5** Select the figure that will come next in the following figure series.



- Ans**
- 1.
  - 2.
  - 3.
  - 4.

Question ID : 8161612277  
Status : Answered  
Chosen Option : 3

**Q.6** Select the combination of letters that when sequentially placed in the gaps of the given letter series will complete the series.

abcc\_\_ab\_\_de\_\_ccd\_eab\_\_de

- Ans**
- 1. ccdabdccddde
  - 2. ddeccdabdccd
  - 3. ddeccdabdccc
  - 4. ddecbsdccdcda

Question ID : 8161612270  
Status : Answered  
Chosen Option : 2

Q.7 Select the letter cluster that will replace the question mark (?) in the following series.

JAM, KEL, LIK, ?, NUI

- Ans
- 1. MEJ
  - 2. JEM
  - 3. MOJ
  - 4. MAJ

Question ID : 8161612274  
Status : Answered  
Chosen Option : 3

Q.8 In a certain code language, IF is written as 225 and BUT is written as 1849. How will SLIP be written as in that language?

- Ans
- 1. 1336
  - 2. 3163
  - 3. 3136
  - 4. 6313

Question ID : 8161612267  
Status : Answered  
Chosen Option : 3

Q.9 Find the missing number from the below options.

16	30	18
4	34	?
10	32	40

- Ans
- 1. 62
  - 2. 22
  - 3. 38
  - 4. 58

Question ID : 8161612261  
Status : Not Attempted and Marked For Review  
Chosen Option : --

Q.10 Pointing to a picture of Rajiv, a lady Neena said, "His sister's father is the only son of my father-in-law." How is Neena related to Rajiv?

- Ans
- 1. Mother
  - 2. Granddaughter
  - 3. Paternal Grandmother
  - 4. Sister

Question ID : 8161612271  
Status : Answered  
Chosen Option : 1

**Q.11** Select the option in which the words in the word-pair shares the same relationship as that shared by the given word-pair.

Tiger : Felidae

- Ans**
- 1. Lion : Leporidae
  - 2. Rabbit : Bovidae
  - 3. Whale : Cetacea
  - 4. Elephant : Canidae

Question ID : 8161612272

Status : **Answered**

Chosen Option : 3

**Q.12** A boy has a total of ₹740 in the denominations of two rupee, five rupee, ten rupee and twenty rupee notes. If the number of each denomination is equal, what is the total number of notes the boy has?

- Ans**
- 1. 80
  - 2. 20
  - 3. 40
  - 4. 60

Question ID : 8161612260

Status : **Answered**

Chosen Option : 1

**Q.13** Read the given statements and conclusions carefully. Assuming that the information given in the statements is true, even if it appears to be at variance with commonly known facts, decide which of the given conclusions logically follow(s) from the statements.

**Statements:**

- I. Some men are animals.
- II. All trees are rivers.
- III. All animals are trees.

**Conclusions:**

- I. Some men are rivers.
- II. All rivers are animals.
- III. All rivers are men.
- IV. All men are trees.

- Ans**
- 1. Only conclusion IV follows
  - 2. Only conclusions I and II follow
  - 3. Only conclusion I follows
  - 4. Only conclusions III and II follow

Question ID : 8161612275

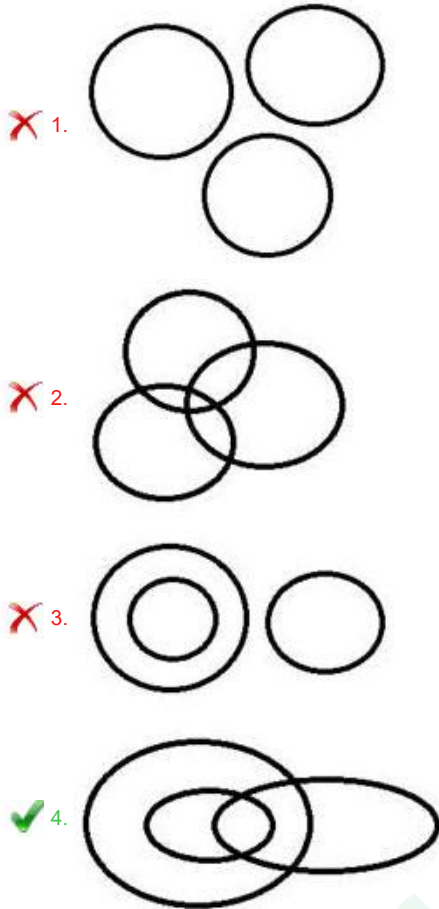
Status : **Answered**

Chosen Option : 3

Q.14 Select the Venn diagram that best represents the relationship between the following classes.

Doctors, Neurosurgeons, Female

Ans



Question ID : 8161612282

Status : Answered

Chosen Option : 4

Q.15 Which two signs should be interchanged in the given equation to make it correct?

$$4 - 7 \times 28 + 12 \div 3 = 4$$

Ans

1.  $\times$  and  $+$
2.  $-$  and  $\div$
3.  $\times$  and  $\div$
4.  $\times$  and  $-$

Question ID : 8161612259

Status : Answered

Chosen Option : 4

Q.16 Select the number that will come next in the following series.

6, 9, 13, 21, 38, 71, ?

- Ans
- 1. 129
  - 2. 101
  - 3. 99
  - 4. 121

Question ID : 8161612263  
Status : Answered  
Chosen Option : 1

Q.17 Select the correct alternative to indicate the arrangement of the following words in a logical and meaningful order.

1. State
2. Village
3. District
4. City
5. Country

- Ans
- 1. 1,3,5,2,4
  - 2. 1,3,5,4,2
  - 3. 2,4,3,1,5
  - 4. 4,3,5,2,1

Question ID : 8161612265  
Status : Answered  
Chosen Option : 3

Q.18 Select the option that is related to the third term in the same way as the second term is related to the first term.

EASY : DDNF :: MAKE : ?

- Ans
- 1. NXPX
  - 2. LDFL
  - 3. LFDL
  - 4. XXPN

Question ID : 8161612268  
Status : Answered  
Chosen Option : 2

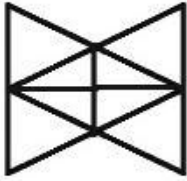


Q.19 Select the option in which the given figure is embedded. (Rotation is NOT allowed)

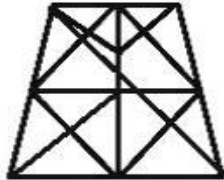


Ans

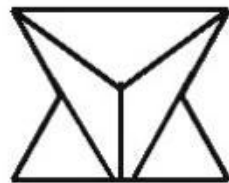
✓ 1.




✗ 2.



✗ 3.



✗ 4.



Question ID : 8161612279  
Status : Answered  
Chosen Option : 1

Q.20 Select the option in which the number set shares the same relationship as that shared by the given number set.  
(6, 42, 1890)

Ans

✗ 1. (7, 23, 1069)

✓ 2. (2, 6, 54)

✗ 3. (9, 102, 1190)

✗ 4. (4, 20, 420)

Question ID : 8161612262  
Status : Answered  
Chosen Option : 2



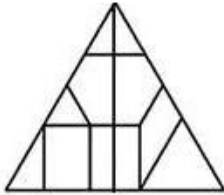
**Q.21** Select the option that is related to the third term in the same way as the second term is related to the first term.

AIDS : VIRUS :: MALARIA : ?

- Ans  1. Parasite  
 2. Virus  
 3. Nematodes  
 4. Bacteria

Question ID : 8161612269  
Status : Answered  
Chosen Option : 1

**Q.22** How many triangles are there in the given figure?



- Ans  1. 12  
 2. 10  
 3. 8  
 4. 15

Question ID : 8161612278  
Status : Answered  
Chosen Option : 2

**Q.23** Rahul is three times as old as Amar. Amber was half the age of Rahul three years ago. After four years from now, Rahul will be 43. What are the present ages of Amar and Amber?

- Ans  1. 38, 21  
 2. 13, 18  
 3. 39, 21  
 4. 13, 21

Question ID : 8161612258  
Status : Answered  
Chosen Option : 2

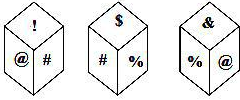
**Q.24** Study the given pattern carefully and select the number that can replace the question mark (?) in it.

(1, 2, 2) (7, 35, 5) (12, 96, ?)

- Ans  1. 7  
 2. 8  
 3. 9  
 4. 11

Question ID : 8161612264  
Status : Answered

**Q.25** Three different positions of the same dice are shown. Select the symbol that will be on the face opposite to the one having '!':



- Ans
- 1. &
  - 2. #
  - 3. %
  - 4. \$

Question ID : 8161612276  
Status : Answered  
Chosen Option : 3

Section : Quantitative Aptitude(Basic Arithmetic Skill)

**Q.1** In  $\Delta PQR$ , S and T are mid-points of PQ and PR, respectively. If  $\angle QPR = 75^\circ$  and  $\angle PRQ = 40^\circ$ , then  $\angle TSQ$  is:

- Ans
- 1.  $115^\circ$
  - 2.  $105^\circ$
  - 3.  $120^\circ$
  - 4.  $135^\circ$

Question ID : 8161612295  
Status : Answered  
Chosen Option : 1

**Q.2** If  $\tan x = \frac{m}{n}$  and  $0^\circ \leq x \leq 90^\circ$ , then the value of  $(\sin x + \cos x)$  is:

- Ans
- 1.  $\frac{1}{\sqrt{m^2+n^2}}$
  - 2.  $\sqrt{m^2-n^2}$
  - 3.  $\frac{1}{\sqrt{m^2-n^2}}$
  - 4.  $\frac{m+n}{\sqrt{m^2+n^2}}$

Question ID : 8161612301  
Status : Answered  
Chosen Option : 4

**Q.3** The value of  $(72 + 34) \div 2 + \{[(75 \div 15) + 6] \times 2\}$  is:

- Ans
- 1. 74
  - 2. 75
  - 3. 86
  - 4. 78

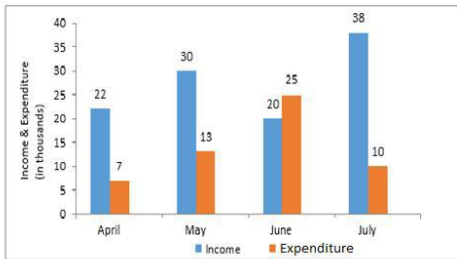
Question ID : 8161612300  
Status : Answered  
Chosen Option : 2

Q.4 Find the factors of the expression  $3x^2 - 5x - 8$ .

- Ans
- 1.  $(x + 1)$  and  $(3x + 8)$
  - 2.  $(x + 1)$  and  $(3x - 8)$
  - 3.  $(x - 1)$  and  $(3x + 8)$
  - 4.  $(x - 1)$  and  $(3x - 8)$

Question ID : 8161612297  
Status : Answered  
Chosen Option : 2

Q.5 The given bar graph represents the income and expenditure of a person during the four consecutive months, April to July, 2019.



What is the percentage difference between the total income and the total expenditure with respect to the total income?

- Ans
- 1. 50%
  - 2. 65%
  - 3. 60%
  - 4. 70%

Question ID : 8161612306  
Status : Answered  
Chosen Option : 1

Q.6 If 40% of a number is less than its 60% by 30, then the 20% of that number is:

- Ans
- 1. 40
  - 2. 60
  - 3. 30
  - 4. 50

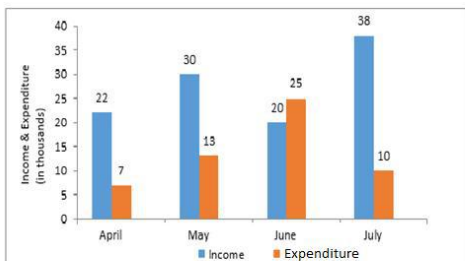
Question ID : 8161612288  
Status : Answered  
Chosen Option : 3

**Q.7** If the average of 35 numbers is 22, the average of the first 17 numbers is 19, and the average of the last 17 numbers is 20, then the 18<sup>th</sup> number is:

- Ans**
- 1. 132
  - 2. 108
  - 3. 133
  - 4. 107

Question ID : 8161612286  
Status : Answered  
Chosen Option : 4

**Q.8** The given bar graph represents the income and expenditure of a person during the four consecutive months, April to July, 2019.



What is the percentage of the total expenditure of the total income?

- Ans**
- 1. 20%
  - 2. 50%
  - 3. 40%
  - 4. 30%

Question ID : 8161612307  
Status : Answered  
Chosen Option : 2

**Q.9** If  $xy = 16$  and  $x^2 + y^2 = 32$ , then the value of  $(x + y)$  is:

- Ans**
- 1.  $\pm 10$
  - 2.  $\pm 4$
  - 3.  $\pm 8$
  - 4.  $\pm 6$

Question ID : 8161612298  
Status : Answered  
Chosen Option : 3

Q.10 If  $\sin x - \cos x = 0$ , then the value of  $(\sin^3 x - \cos^3 x)$  is:

- Ans
- 1. 1
  - 2. 2
  - 3. 0
  - 4. 4

Question ID : 8161612303  
Status : Answered  
Chosen Option : 3

Q.11 If Ravi sells an old scooter for ₹18,000, then his loss incurred is 10%. If he sells it to gain a profit of 15%, then the selling price is:

- Ans
- 1. ₹20,000
  - 2. ₹23,000
  - 3. ₹24,000
  - 4. ₹22,000

Question ID : 8161612289  
Status : Answered  
Chosen Option : 2

Q.12 The compound interest and the amount obtained, on a certain sum of money are ₹820 and ₹8,820 respectively after 2 years. If the rate of interest compounded yearly, then the rate of interest is:

- Ans
- 1. 8%
  - 2. 7%
  - 3. 6%
  - 4. 5%

Question ID : 8161612291  
Status : Answered  
Chosen Option : 4

Q.13 In a circle two equal and parallel chords are 6 cm apart and lie on the opposite sides of the centre of the circle. If the length of each chord is 8 cm, then the radius of the circle is:

- Ans
- 1. 3 cm
  - 2. 7 cm
  - 3. 5 cm
  - 4. 2 cm

Question ID : 8161612293  
Status : Answered  
Chosen Option : 3

**Q.14** To a circle with centre at O, two tangents AP and AQ are drawn from an external point A. If the  $\angle PAQ = 80^\circ$ , then the  $\angle POQ$  is:

- Ans
- 1.  $80^\circ$
  - 2.  $70^\circ$
  - 3.  $90^\circ$
  - 4.  $100^\circ$

Question ID : 8161612292  
Status : Answered  
Chosen Option : 4

**Q.15** If  $a + b = 10$  and  $\frac{3}{7}$  of  $ab = 9$ , then the value of  $a^3 + b^3$  is:

- Ans
- 1. 350
  - 2. 370
  - 3. 270
  - 4. 360

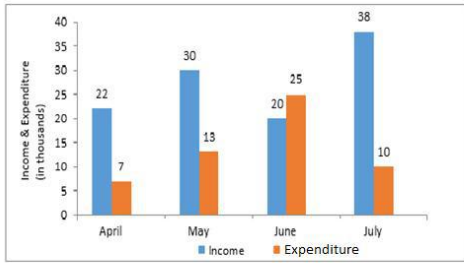
Question ID : 8161612296  
Status : Answered  
Chosen Option : 3

**Q.16**  $\frac{\cot x}{1 + \operatorname{cosec} x} + \frac{1 + \operatorname{cosec} x}{\cot x}$  is equal to:

- Ans
- 1.  $2 \sin x$
  - 2.  $2 \cos x$
  - 3.  $2 \operatorname{cosec} x$
  - 4.  $2 \sec x$

Question ID : 8161612302  
Status : Answered  
Chosen Option : 4

**Q.17** The given bar graph represents the income and expenditure of a person during the four consecutive months, April to July, 2019.



What is the average expenditure of the person?

- Ans**
- 1. ₹17,250
  - 2. ₹15,570
  - 3. ₹13,750
  - 4. ₹17,520

Question ID : 8161612305  
Status : Answered  
Chosen Option : 3

**Q.18** In a  $\triangle ABC$ ,  $DE$  is parallel to  $BC$  where  $D$  and  $E$  are the points on  $AB$  and  $AC$ , respectively and  $AD = 4$  cm,  $DB = 8$  cm,  $AE = 3$  cm. Length of  $EC$  is:

- Ans**
- 1. 5 cm
  - 2. 6 cm
  - 3. 9 cm
  - 4. 7 cm

Question ID : 8161612294  
Status : Answered  
Chosen Option : 2

**Q.19** If 2794p561 is divisible by 9, then the value of  $p$  is:

- Ans**
- 1. 3
  - 2. 2
  - 3. 0
  - 4. 4

Question ID : 8161612299  
Status : Answered  
Chosen Option : 2



**Q.20** If the measures of the sides of a cuboid are 8 cm, 6 cm and 10 cm, then the volume (in  $\text{cm}^3$ ) of the cuboid, is:

- Ans
- 1. 840
  - 2. 480
  - 3. 540
  - 4. 680

Question ID : 8161612285  
Status : Answered  
Chosen Option : 2

**Q.21** A train that is running at the speed of 72 km/h crosses an electric pole in 36 seconds. The length of the train (in metres) is:

- Ans
- 1. 620 m
  - 2. 720 m
  - 3. 460 m
  - 4. 360 m

Question ID : 8161612284  
Status : Answered  
Chosen Option : 2

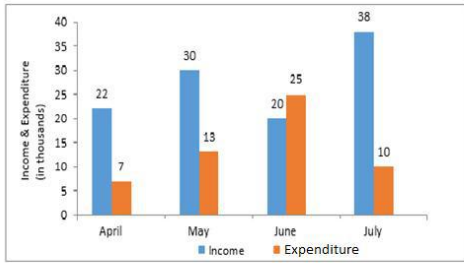
**Q.22** Tap A can fill a tank in 6 hours, tap B can fill the same tank in 8 hours and tap C can empty the same tank in 4 hours. If all three taps A, B and C are opened together, then how much time (in hours) will be taken to fill the tank?

- Ans
- 1. 30
  - 2. 20
  - 3. 24
  - 4. 28

Question ID : 8161612283  
Status : Answered  
Chosen Option : 3



**Q.23** The given bar graph represents the income and expenditure of a person during the four consecutive months, April to July, 2019.



What is the average income of the person?

- Ans
- 1. ₹20,500
  - 2. ₹27,500
  - 3. ₹25,500
  - 4. ₹17,500

Question ID : 8161612304

Status : Answered

Chosen Option : 2

**Q.24** If  $a : b = 3 : 5$  and  $b : c = 2 : 3$ , then the proportion  $a : b : c$  is:

- Ans
- 1. 3 : 5 : 3
  - 2. 3 : 10 : 3
  - 3. 3 : 10 : 15
  - 4. 6 : 10 : 15

Question ID : 8161612290

Status : Answered

Chosen Option : 4

**Q.25** The marked price and cost price of a book are ₹850 and ₹748, respectively. The discount in percentage is:

- Ans
- 1. 8%
  - 2. 15%
  - 3. 12%
  - 4. 10%

Question ID : 8161612287

Status : Answered

Chosen Option : 3

Section : General Awareness

**Q.1 Which Indian economist was appointed as the Chief Economist of the World Bank from 2012 to 2016?**

- Ans
- 1. Jagdish Bhagwati
  - 2. Kaushik Basu
  - 3. Indraprasad Gordhanbhai Patel
  - 4. Raghuram Rajan

Question ID : **8161612316**  
Status : **Answered**  
Chosen Option : **2**

**Q.2 Which of the following temples has Panchayatana Style of architecture?**

- Ans
- 1. Dashavatara Temple
  - 2. Sun Temple
  - 3. Brihadeeswara Temple
  - 4. Kashi Vishwanath temple

Question ID : **8161612311**  
Status : **Not Answered**  
Chosen Option : **--**

**Q.3 Which former badminton player of India was awarded the 'Sportstar Lifetime Achievement Award' in February 2019?**

- Ans
- 1. Prakash Padukone
  - 2. Pulella Gopichand
  - 3. Chetan Anand
  - 4. Sanave Thomas

Question ID : **8161612332**  
Status : **Answered**  
Chosen Option : **1**

**Q.4 What is the chemical name of 'oil of vitriol'?**

- Ans
- 1. Methyl alcohol
  - 2. Calcium hydroxide
  - 3. Sodium chloride
  - 4. Sulfuric acid

Question ID : **8161612317**  
Status : **Answered**  
Chosen Option : **1**

Q.5 Which planet is made up of thick white and yellowish clouds of sulfuric acid?

- Ans
- 1. Uranus
  - 2. Venus
  - 3. Neptune
  - 4. Mars

Question ID : 8161612318  
Status : Answered  
Chosen Option : 3

Q.6 In which language were the Mughal court chronicles written?

- Ans
- 1. Sanskrit
  - 2. Hindi
  - 3. Urdu
  - 4. Persian

Question ID : 8161612324  
Status : Answered  
Chosen Option : 4

Q.7 As per state census 2011, which of the following is the least populous state of India?

- Ans
- 1. Kerala
  - 2. Sikkim
  - 3. Odisha
  - 4. Tamil Nadu

Question ID : 8161612320  
Status : Answered  
Chosen Option : 2

Q.8 Which child activist became the first Indian to be awarded the 'Changemaker Award 2019' (given by the Bill and Melinda Gates Foundation) for her work towards abolition of child marriage in Rajasthan?

- Ans
- 1. Kanchan Upadhaya
  - 2. Ridhima Pandey
  - 3. Payal Jangid
  - 4. Ayushi Dholakia

Question ID : 8161612327  
Status : Answered  
Chosen Option : 3

Q.9 Which Indian mountain looks like a giant pyramid and has a flat summit area and two peaks?

- Ans
- 1. Saltoro Kangri
  - 2. Mamostang Kangri
  - 3. Nanda Devi
  - 4. Kamet

Question ID : 8161612322  
Status : Not Answered  
Chosen Option : --

Q.10 Which of the following prominent leaders wrote the book 'Citizen Delhi: My Life, My Times'?

- Ans
- 1. Sheila Dikshit
  - 2. Arvind Kejriwal
  - 3. Harsh Vardhan
  - 4. Arun Jaitley

Question ID : 8161612326  
Status : Answered  
Chosen Option : 1

Q.11 Which of the following pairs is INCORRECTLY matched?

- Ans
- 1. Bharat Sanchar Nigam Limited – Miniratna
  - 2. Indian Oil Corporation Limited – Maharatna
  - 3. Airport Authority of India – Navratna
  - 4. Hindustan Aeronautics Limited – Navratna

Question ID : 8161612315  
Status : Answered  
Chosen Option : 1

Q.12 Who designed the first analog computer in India?

- Ans
- 1. Subodh Chandra Das Gupta
  - 2. Deb Kumar Bose
  - 3. Samarendra Kumar Mitra
  - 4. Bimal Kumar Bhattacharyya

Question ID : 8161612309  
Status : Not Answered  
Chosen Option : --

Q.13 Which of the following monuments has NOT been notified as a National Geo-heritage Monument by the Geological Survey of India (GSI)?

- Ans
- 1. Pillow Lava in Iron Ore belt at Nomira, Odisha
  - 2. Nagahill Ophiolite site near Pungro, Nagaland
  - 3. Peninsular Gneiss Lalbagh, Karnataka
  - 4. Gingee Fort Villupuram District, Tamil Nadu

Question ID : 8161612323  
Status : Answered  
Chosen Option : 4

Q.14 On which date did Indian National Congress pass the Resolution of 'Poorna Swaraj' (total independence) at the Lahore Session?

- Ans
- 1. 21 December 1929
  - 2. 19 December 1929
  - 3. 26 December 1929
  - 4. 15 December 1929

Question ID : 8161612325  
Status : Answered  
Chosen Option : 1

Q.15 Which instrument records the waves reaching the surface during an earthquake?

- Ans
- 1. Seismograph
  - 2. Chronometer
  - 3. Barograph
  - 4. Manometer

Question ID : 8161612321  
Status : Answered  
Chosen Option : 1

Q.16 Which player became the first Indian brand ambassador of La Liga (the top tier of Spanish club football) in December 2019?

- Ans
- 1. Virat Kohli
  - 2. Sachin Tendulkar
  - 3. Mahendra Singh Dhoni
  - 4. Rohit Sharma

Question ID : 8161612331  
Status : Not Answered  
Chosen Option : --

Q.17 On December 2019, the Prime Minister of \_\_\_\_\_ announced the commencement of the 'Gandhi Citizenship Education Award' to be given every year.

- Ans
- 1. Bhutan
  - 2. Japan
  - 3. Portugal
  - 4. France

Question ID : 8161612313  
Status : Not Answered  
Chosen Option : --

Q.18 Which festival marks the beginning of the Tibetan New Year?

- Ans
- 1. Saga Dawa Festival
  - 2. Ongkor Festival
  - 3. Losar festival
  - 4. Shoton Festival

Question ID : 8161612310  
Status : Not Answered  
Chosen Option : --

Q.19 When was the 'Rajiv Gandhi Khel Ratna Award' instituted?

- Ans
- 1. 1993-94
  - 2. 1991-92
  - 3. 1985-86
  - 4. 2002-03

Question ID : 8161612330  
Status : Answered  
Chosen Option : 1

Q.20 What was India's rank in the world in terms of military power as per the 'Global Firepower Nations Index 2019'?

- Ans
- 1. 4th
  - 2. 9th
  - 3. 3rd
  - 4. 5th

Question ID : 8161612314  
Status : Answered  
Chosen Option : 1

Q.21 Who was sworn in as the 11th Chief Minister of Jharkhand on 29 December 2019?

- Ans  1. Hemant Soren  
 2. Shibu Soren  
 3. Raghubar Das  
 4. Alamgir Alam

Question ID : 8161612312  
Status : Answered  
Chosen Option : 1

Q.22 In DASD, what is the full form of 'A'?

- Ans  1. Access  
 2. Around  
 3. Accessible  
 4. Arithmetic

Question ID : 8161612308  
Status : Not Answered  
Chosen Option : --

Q.23 Which scientist arranged the Periodic Table of Elements in the order of increasing atomic masses?

- Ans  1. Dmitri Mendeleev  
 2. Henry Moseley  
 3. Robert Boyle  
 4. William Ramsay

Question ID : 8161612319  
Status : Answered  
Chosen Option : 1

Q.24 In which year did Motilal Nehru (Chairman) and eight other Congress leaders draft a constitution for India?

- Ans  1. 1928  
 2. 1925  
 3. 1930  
 4. 1950

Question ID : 8161612328  
Status : Answered  
Chosen Option : 2

**Q.25 What is the provision of Article 49 of the Constitution of India?**

- Ans**
- 1. Provision for free and compulsory education for children
  - 2. Promotion of international peace and security
  - 3. Prohibition of employment of children (Under the age of 14) in factories and mines
  - 4. Protection of monuments and places and objects of natural importance

Question ID : **8161612329**

Status : **Answered**

Chosen Option : **4**





# Latest Sarkari jobs, Govt Exam alerts, Results and Vacancies

- ▶ Latest News and Notification
- ▶ Exam Paper Analysis
- ▶ Topic-wise weightage
- ▶ Previous Year Papers with Answer Key
- ▶ Preparation Strategy & Subject-wise Books

To know more [Click Here](#)



[www.prepp.in](http://www.prepp.in)