



Practice, Learn and Achieve
Your Goal with Prepp

RRB JE Exam

Previous Paper

Simplifying
Government Exams



SSC CHSL



IAS EXAM



RRB NTPC



NTSE



CDS



SSC CGL



CBSE UGC NET



IBPS PO



NDA



SBI PO



IBPS CLERK



AFCAT



SSC JE



CTET



CSIR UGC NET



CAPF





IBPS RRB

www.prepp.in

Railway Recruitment Board

Notations :

- Options shown in **green** color and with  icon are correct.
- Options shown in **red** color and with  icon are incorrect.

Question Paper Name: Junior Engineer 30th Aug Shift 3 Actual
Subject Name: Junior Engineer
Creation Date: 2015-08-18 12:38:41.0
Cut Off: 0
Duration: 120
Number of Questions: 150
Total Marks: 150.0

Junior Engineer

Group Number : 1
Group Id : 13
Group Maximum Duration : 0
Group Minimum Duration : 120
Revisit allowed for view? : No
Revisit allowed for edit? : No
Break time: 0
Group Marks: 150.0

Junior Engineer

Section Id : 13
Section Number : 1
Section type : Online
Mandatory or Optional: Mandatory
Number of Questions: 150
Number of Questions to be attempted: 150
Section Marks: 150.0





Sub-Section Number: 1
Sub-Section Id: 13
Question Shuffling Allowed : Yes

Question Number : 1 Question Id : 2251 Question Type : MCQ Option Shuffling : No
Correct : 1.0 Wrong : 0.33

A closed system receives 60 KJ heat but its internal energy decreases by 30 KJ. Then the work done by the system is

- a. 90 KJ
- b. 30 KJ
- c. -30 KJ
- d. -90 KJ

Options :

- 1.  a
- 2.  b
- 3.  c
- 4.  d





Question Number : 2 Question Id : 2252 Question Type : MCQ Option Shuffling : No

Correct : 1.0 Wrong : 0.33

At critical point, the enthalpy of vaporization is

- a. Dependent on temperature only
- b. Maximum
- c. Minimum
- d. Zero

Options :

- 1.  a
- 2.  b
- 3.  c
- 4.  d





Question Number : 3 Question Id : 2253 Question Type : MCQ Option Shuffling : No

Correct : 1.0 Wrong : 0.33

Which thermodynamics law predicts correctly, the degree of completion of chemical reaction?

- a. Zeroth law
- b. First law
- c. Second law
- d. Third law

Options :

- 1.  a
- 2.  b
- 3.  c
- 4.  d





Question Number : 4 Question Id : 2254 Question Type : MCQ Option Shuffling : No

Correct : 1.0 Wrong : 0.33

Intensity of radiation at a surface in perpendicular direction is equal to

- a. Product of emissivity of surface and $1/\pi$
- b. Product of emissivity of surface and π
- c. Product of emissive power of surface and $1/\pi$
- d. Product of emissive power of surface and π

Options :

- 1.  a
- 2.  b
- 3.  c
- 4.  d

For the above question, User had specified 'ignore' during keys upload.




Question Number : 5 Question Id : 2255 Question Type : MCQ Option Shuffling : No

Correct : 1.0 Wrong : 0.33

If the temperature of a solid surface changes from 27°C to 627°C , then its emissive power changes in which ratio?

- a. 6 : 1
- b. 9 : 1
- c. 27 : 1
- d. 81 : 1

Options :

- 1.  a
- 2.  b
- 3.  c





4.  d

Question Number : 6 Question Id : 2256 Question Type : MCQ Option Shuffling : No
Correct : 1.0 Wrong : 0.33

The purpose of employing supercharging for an engine is

- a. To provide forced cooling air
- b. To raise exhaust pressure
- c. To inject excess fuel for coping with higher load
- d. To supply an intake of air at a density greater than the density of the surrounding atmosphere

Options :





- 1.  a
- 2.  b
- 3.  c
- 4.  d

Question Number : 7 Question Id : 2257 Question Type : MCQ Option Shuffling : No
Correct : 1.0 Wrong : 0.33

In a petrol engine, the tendency for detonation increases with

- a. Retarded spark timing
- b. Running the engine at high speed
- c. Supercharging
- d. Increasing the cooling rate

Options :





- 1.  a
- 2.  b
- 3.  c
- 4.  d

Question Number : 8 Question Id : 2258 Question Type : MCQ Option Shuffling : No
Correct : 1.0 Wrong : 0.33

Small amount of carbonaceous material sprinkled on the inner surface of mould cavity is called

- a. Backing sand
- b. Facing sand
- c. Green sand
- d. Dry sand

Options :

- 1.  a
- 2.  b
- 3.  c
- 4.  d





Question Number : 9 Question Id : 2259 Question Type : MCQ Option Shuffling : No

Correct : 1.0 Wrong : 0.33

What does hydrostatic pressure in extrusion process improve?

- a. Ductility
- b. Compressive strength
- c. Brittleness
- d. Tensile strength

Options :

- 1.  a
- 2.  b
- 3.  c
- 4.  d





Question Number : 10 Question Id : 2260 Question Type : MCQ Option Shuffling : No

Correct : 1.0 Wrong : 0.33

Which one of the following processes is the wire drawing process?

- a. Compressive
- b. Tensile
- c. Shear
- d. Hydrostatic stress

Options :





1.  a
2.  b
3.  c
4.  d

Question Number : 11 Question Id : 2261 Question Type : MCQ Option Shuffling : No
Correct : 1.0 Wrong : 0.33

For cutting of brass with single point cutting tool on a lathe, tool should have

- a. Negative rake angle
- b. Positive rake angle
- c. Zero rake angle
- d. Zero side relief angle

Options :





1.  a
2.  b
3.  c
4.  d

Question Number : 12 Question Id : 2262 Question Type : MCQ Option Shuffling : No
Correct : 1.0 Wrong : 0.33

The marking on a grinding wheel is ' 51 A 36 L 5 V 93'. The code '36' represents the

- a. Structure
- b. Grade
- c. Grain size
- d. Manufacture's number

Options :





1.  a
2.  b
3.  c
4.  d

Correct : 1.0 Wrong : 0.33

For gas welding, the pressure desired at the welding torch for oxygen is

- a. 7 to 103 kN/m²
- b. 70 to 280 kN/m²
- c. 280 to 560 kN/m²
- d. 560 to 840 kN/m²

Options :

- 1.  a
- 2.  b
- 3.  c
- 4.  d





Question Number : 14 Question Id : 2264 Question Type : MCQ Option Shuffling : No

Correct : 1.0 Wrong : 0.33

In straight polarity welding

- a. Electrode holder is connected to the negative and work to positive
- b. Electrode holder is connected to the positive and work to negative
- c. Work is positive and holder is earthed
- d. Holder is positive and work is earthed

Options :

- 1.  a
- 2.  b
- 3.  c
- 4.  d





Question Number : 15 Question Id : 2265 Question Type : MCQ Option Shuffling : No

Correct : 1.0 Wrong : 0.33

At the instant of starting, the per unit slip of 3-phase induction motor is

- a. 0.05
- b. 0.1
- c. 1.0
- d. 0.5

Options :





1.  a
2.  b
3.  c
4.  d

Question Number : 16 Question Id : 2266 Question Type : MCQ Option Shuffling : No
Correct : 1.0 Wrong : 0.33

Usually, the number of poles in a turbo alternator is

- a. 2
- b. 4
- c. 6
- d. 8

Options :





1.  a
2.  b
3.  c
4.  d

Question Number : 17 Question Id : 2267 Question Type : MCQ Option Shuffling : No
Correct : 1.0 Wrong : 0.33

Torque developed by 3 phase induction motor varies with supply voltage as

- a. V
- b. $1/V$
- c. V^2
- d. \sqrt{V}

Options :

1.  a
2.  b
3.  c
4.  d

Question Number : 18 Question

Latest Sarkari Jobs, Govt Exam Results,
Vacancies and updates on one click





Know More

Correct : 1.0 Wrong : 0.33

Field coils of DC generator are usually made up of

- a. mica
- b. copper
- c. cast iron
- d. carbon

Options :

- 1.  a
- 2.  b
- 3.  c
- 4.  d





Question Number : 19 Question Id : 2269 Question Type : MCQ Option Shuffling : No

Correct : 1.0 Wrong : 0.33

Power transformers are designed to have maximum efficiency around

- a. no load
- b. full load
- c. 25 % of full load
- d. 50 % of full load

Options :

- 1.  a
- 2.  b
- 3.  c
- 4.  d





Question Number : 20 Question Id : 2270 Question Type : MCQ Option Shuffling : No

Correct : 1.0 Wrong : 0.33

No iron losses means..... are zero

- a. only hysteresis losses
- b. only copper losses
- c. hysteresis and eddy current losses
- d. eddy current and copper losses

Options :





1.  a
2.  b
3.  c
4.  d

Question Number : 21 Question Id : 2271 Question Type : MCQ Option Shuffling : No
Correct : 1.0 Wrong : 0.33

Number of primary turns of a transformer is 1200. If transformation ratio is $1/15$, number of secondary turns is

- a. 2200
- b. 80
- c. 440
- d. 1800

Options :





1.  a
2.  b
3.  c
4.  d

Question Number : 22 Question Id : 2272 Question Type : MCQ Option Shuffling : No
Correct : 1.0 Wrong : 0.33

Heating effect in a heating coil is directly proportional to

- a. I
- b. I^2
- c. R^2
- d. \sqrt{R}

Options :





1.  a
2.  b
3.  c
4.  d

Question Number : 23 Question Id : 2273 Question Type : MCQ Option Shuffling : No
Correct : 1.0 Wrong : 0.33

Which of the following is not a type of turbine

- a. Momentum turbine
- b. Propeller turbine
- c. Impulse turbine
- d. Reaction turbine

Options :





- 1.  a
- 2.  b
- 3.  c
- 4.  d

Question Number : 24 Question Id : 2274 Question Type : MCQ Option Shuffling : No
Correct : 1.0 Wrong : 0.33

Resistance of a conductor is NOT directly proportional to

- a. Temperature
- b. Resistivity
- c. Length
- d. Area of cross section

Options :





- 1.  a
- 2.  b
- 3.  c
- 4.  d

Question Number : 25 Question Id : 2275 Question Type : MCQ Option Shuffling : No
Correct : 1.0 Wrong : 0.33

Distributive Law states

- a. $A.B = B.A$
- b. $A.(B.C) = (A.B).C$
- c. $A+(B+C) = (A+B)+C$
- d. $A.(B+C) = A$

Options :

1.  a
2.  b
3.  c
4.  d





Question Number : 26 Question Id : 2276 Question Type : MCQ Option Shuffling : No

Correct : 1.0 Wrong : 0.33

A gate whose inputs are inverted is termed as

- a. Drop Gate
- b. Bubbled Gate
- c. Converter Gate
- d. Destructor Gate

Options :

1.  a
2.  b
3.  c
4.  d





Question Number : 27 Question Id : 2277 Question Type : MCQ Option Shuffling : No

Correct : 1.0 Wrong : 0.33

The OR gate performs

- a. Logical Addition
- b. Logical Subtraction
- c. Logical Multiplication
- d. Logical Inversion

Options :

1.  a
2.  b
3.  c
4.  d





Question Number : 28 Question Id : 2278 Question Type : MCQ Option Shuffling : No

Correct : 1.0 Wrong : 0.33

Decimal number 1375 in its octal form is

- a. 2357
- b. 2537
- c. 3257
- d. 4257

Options :

- 1.  a
- 2.  b
- 3.  c
- 4.  d





Question Number : 29 Question Id : 2279 Question Type : MCQ Option Shuffling : No

Correct : 1.0 Wrong : 0.33

Large Signal Amplifier is also known as

- a. Voltage Amplifier
- b. Power Amplifier
- c. Current Amplifier
- d. Circuit Amplifier

Options :

- 1.  a
- 2.  b
- 3.  c
- 4.  d





Question Number : 30 Question Id : 2280 Question Type : MCQ Option Shuffling : No

Correct : 1.0 Wrong : 0.33

A filter circuit that consists of a second choke connected to output side in order to improve filtering action is known as

- a. T-type filter circuit
- b. π type filter circuit
- c. R-L filter circuit
- d. Inverted L-type filter circuit

Options :

- 1.  a
- 2.  b
- 3.  c
- 4.  d





Question Number : 31 Question Id : 2281 Question Type : MCQ Option Shuffling : No

Correct : 1.0 Wrong : 0.33

For a full wave rectifier, ripple factor is

- a. 1.482
- b. 0.482
- c. 1.21
- d. 0.21

Options :

- 1.  a
- 2.  b
- 3.  c
- 4.  d





Question Number : 32 Question Id : 2282 Question Type : MCQ Option Shuffling : No

Correct : 1.0 Wrong : 0.33

The process of applying DC voltages across different terminals of a transistor is called

- a. Open-Circuiting
- b. Biasing
- c. Combination
- d. Unbiasing

Options :





1.  a
2.  b
3.  c
4.  d

Question Number : 33 Question Id : 2283 Question Type : MCQ Option Shuffling : No
Correct : 1.0 Wrong : 0.33

LED's in reverse bias condition emit

- a. Brighter Light
- b. Dimmer Light
- c. Same as in forward biasing
- d. No Light

Options :





1.  a
2.  b
3.  c
4.  d

Question Number : 34 Question Id : 2284 Question Type : MCQ Option Shuffling : No
Correct : 1.0 Wrong : 0.33

The movement of electrons which is caused by application of electric field is

- a. Drift current
- b. Diffusion current
- c. Conventional current
- d. Non-conventional current

Options :

1.  a
2.  b
3.  c
4.  d

Question Number : 35 Question

Latest Sarkari Jobs, Govt Exam Results,
Vacancies and updates on one click





[Know More](#)

Correct : 1.0 Wrong : 0.33

The intensity of pressure developed by surface tension of 0.075 N/m in a droplet of water of 0.075 mm diameter is

- a. 0.8 N/cm^2
- b. 0.6 N/cm^2
- c. 0.4 N/cm^2
- d. 400 N/cm^2

Options :

- 1.  a
- 2.  b
- 3.  c
- 4.  d





Question Number : 36 Question Id : 2286 Question Type : MCQ Option Shuffling : No

Correct : 1.0 Wrong : 0.33

The point at which the resultant pressure on an immersed surface acts, is known as

- a. Centre of gravity
- b. Centre of depth
- c. Centre of pressure
- d. Centre of immersed surface

Options :

- 1.  a
- 2.  b
- 3.  c
- 4.  d





Question Number : 37 Question Id : 2287 Question Type : MCQ Option Shuffling : No

Correct : 1.0 Wrong : 0.33

In a CPM network the activity is non critical if

- a. $EST=LST \text{ \& } EFT=LFT$
- b. $EST<LST \text{ \& } EFT<LFT$
- c. $EST>LST \text{ \& } EFT>LFT$
- d. $EST<LST \text{ \& } EFT>LFT$

Options :

1.  a
2.  b
3.  c
4.  d





Question Number : 38 Question Id : 2288 Question Type : MCQ Option Shuffling : No

Correct : 1.0 Wrong : 0.33

Which one of the following parameters can be used to estimate the angle of friction of a sandy soil

- a. Particle size
- b. Roughness of particle
- c. Density Index
- d. Particle size distribution

Options :

1.  a
2.  b
3.  c
4.  d




Question Number : 39 Question Id : 2289 Question Type : MCQ Option Shuffling : No

Correct : 1.0 Wrong : 0.33

In order to determine the natural features such as valleys, rivers, lakes etc. the surveying preferred is

- a. City surveying
- b. Location surveying
- c. Cadastral surveying
- d. Topographical surveying

Options :

1.  a
2.  b
3.  c

4.  d

Question Number : 40 Question Id : 2290 Question Type : MCQ Option Shuffling : No

Correct : 1.0 Wrong : 0.33

In an optical square, the angle between the first incident ray and the last reflected ray is

- a. 60°
- b. 90°
- c. 120°
- d. 150°

Options :

1.  a

2.  b

3.  c

4.  d

Question Number : 41 Question Id : 2291 Question Type : MCQ Option Shuffling : No

Correct : 1.0 Wrong : 0.33

The coefficient of earth pressure at rest is given by ; where μ = Poisson's ratio

- a. $\mu / (1 + \mu)$
- b. $(1 + \mu) / \mu$
- c. $\mu / (1 - \mu)$
- d. $(1 - \mu) / \mu$

Options :

1.  a

2.  b

3.  c

4.  d





Question Number : 42 Question Id : 2292 Question Type : MCQ Option Shuffling : No

Correct : 1.0 Wrong : 0.33

If p is the pitch of the rivets and d is the gross diameter of rivets, the tearing efficiency of joints is equal to

- a. $p/(p-d)$
- b. $p/(p+d)$
- c. $(p-d)/p$
- d. $(p+d)/p$

Options :

- 1.  a
- 2.  b
- 3.  c
- 4.  d





Question Number : 43 Question Id : 2293 Question Type : MCQ Option Shuffling : No

Correct : 1.0 Wrong : 0.33

The ultimate strength of the steel used for pre-stressing is nearly

- a. 250 N/mm^2
- b. 415 N/mm^2
- c. 500 N/mm^2
- d. 1500 N/mm^2

Options :

- 1.  a
- 2.  b
- 3.  c
- 4.  d





Question Number : 44 Question Id : 2294 Question Type : MCQ Option Shuffling : No

Correct : 1.0 Wrong : 0.33

For rivet diameter upto 24 mm, the diameter of rivet hole is larger than the diameter of rivet by

- a. 1 mm
- b. 1.5 mm
- c. 2 mm
- d. 2.5 mm

Options :

1.  a
2.  b
3.  c
4.  d





Question Number : 45 Question Id : 2295 Question Type : MCQ Option Shuffling : No

Correct : 1.0 Wrong : 0.33

The percentage of gypsum added to the clinker during manufacturing process is

- a. 0.2
- b. 0.25 to 0.35
- c. 2.5 to 3.5
- d. 5 to 10

Options :

1.  a
2.  b
3.  c
4.  d





Question Number : 46 Question Id : 2296 Question Type : MCQ Option Shuffling : No

Correct : 1.0 Wrong : 0.33

Which of the following is softwood?

- a. Deodar
- b. Teak
- c. Sal
- d. Mahogany

Options :

1.  a
2.  b
3.  c
4.  d

Which of the following controls the speed of energy meter?

- a. Braking magnet
- b. Series magnet
- c. Shunt magnet
- d. Shading band

Options :



Which one can be called ammeter and voltmeter?

- a. A high resistance in series with the voltmeter
- b. A low resistance across the terminals of voltmeter
- c. A low resistance in series with the voltmeter
- d. A high resistance across the terminals of the voltmeter





Options :



Resistance can be measured with

- a. Ammeter
- b. Voltmeter
- c. Ohm-meter and resistance bridges
- d. Wattmeter

Options :

- 1.  a
- 2.  b
- 3.  c
- 4.  d





Question Number : 50 Question Id : 2300 Question Type : MCQ Option Shuffling : No

Correct : 1.0 Wrong : 0.33

Potentiometer is what type of instrument?

- a. Indicating type
- b. Calibrating type
- c. Recording type
- d. Comparison type

Options :

- 1.  a
- 2.  b
- 3.  c
- 4.  d





Question Number : 51 Question Id : 2301 Question Type : MCQ Option Shuffling : No

Correct : 1.0 Wrong : 0.33

A digital frequency counter can be converted to Digital Volt Meter by addition of which one?

- a. D/A converter
- b. voltage controlled oscillator
- c. operational amplifier
- d. power amplifier

Options :

- 1.  a
- 2.  b
- 3.  c
- 4.  d

Question Number : 52 Question Id : 2302 Question Type : MCQ Option Shuffling : No

Correct : 1.0 Wrong : 0.33

The prescribed per seat water demand for restaurant is

- a. 100 litres per day
- b. 70 litres per day
- c. 180 litres per day
- d. 45 – 90 litres per day

Options :

1.  a

2.  b

3.  c

4.  d

Question Number : 53 Question Id : 2303 Question Type : MCQ Option Shuffling : No

Correct : 1.0 Wrong : 0.33

When fluoride concentration exceeded from 2 mg/l, it may cause

- a. bone fluorosis
- b. skeletal abnormalities
- c. discoloration of teeth
- d. skin disease

Options :

1.  a

2.  b

3.  c

4.  d





Question Number : 54 Question Id : 2304 Question Type : MCQ Option Shuffling : No

Correct : 1.0 Wrong : 0.33

The hardness that is equivalent to alkalinity is known as

- a. total hardness
- b. carbonate hardness
- c. non carbonate hardness
- d. pseudo hardness

Options :





- 1.  a
- 2.  b
- 3.  c
- 4.  d

Question Number : 55 Question Id : 2305 Question Type : MCQ Option Shuffling : No
Correct : 1.0 Wrong : 0.33

In case of air pollution, the most affected part of vegetation is

- a. stems of vegetation
- b. roots of vegetation
- c. leaves of vegetation
- d. fruits of vegetation

Options :





- 1.  a
- 2.  b
- 3.  c
- 4.  d

Question Number : 56 Question Id : 2306 Question Type : MCQ Option Shuffling : No
Correct : 1.0 Wrong : 0.33

The cut off frequencies of 707 HZ and 1414 HZ define an octave band, whose band centre frequency is

- a. 1050 HZ and would be referred to as the 1050 HZ octave band annoyance
- b. 1000 HZ and would be referred to as the 1000 HZ octave band
- c. 1060.5 HZ and would be referred to as the 1060.5 HZ octave band
- d. 900 HZ and would be referred to as the 900 HZ octave band

Options :

1.  a
2.  b
3.  c
4.  d





Question Number : 57 Question Id : 2307 Question Type : MCQ Option Shuffling : No

Correct : 1.0 Wrong : 0.33

In natural rainwater, the formation of carbonic acid takes place due to dissolution of CO_2 in water which causes reduction of pH

- a. 5.6 at 20°C temperature
- b. 5.6 at 25°C temperature
- c. 6.5 at 20°C temperature
- d. 6.6 at 20°C temperature

Options :

1.  a
2.  b
3.  c
4.  d




Question Number : 58 Question Id : 2308 Question Type : MCQ Option Shuffling : No

Correct : 1.0 Wrong : 0.33

Digital Versatile Disk (DVD) is a

- a. Random access memory
- b. Sequential access memory
- c. Destructive memory
- d. Virtual memory

Options :

1.  a
2.  b
3.  c

4.  d

Question Number : 59 Question Id : 2309 Question Type : MCQ Option Shuffling : No
Correct : 1.0 Wrong : 0.33

Which of the following is used by banking industry for faster processing of large volume of cheques?

- a. Bar-Code Reader
- b. OCR
- c. MICR
- d. OMR

Options :

1.  a

2.  b

3.  c

4.  d

Question Number : 60 Question Id : 2310 Question Type : MCQ Option Shuffling : No
Correct : 1.0 Wrong : 0.33

EEPROM stands for

- a. Electrically Erasable Programmable ROM
- b. Electronically Erasable Programmable ROM
- c. Electrically Engineered Programmable ROM
- d. Electrically Erasable Persistent ROM

Options :

1.  a

2.  b

3.  c





4.  d

Question Number : 61 Question Id : 2311 Question Type : MCQ Option Shuffling : No
Correct : 1.0 Wrong : 0.33

The primary objective of a time-sharing operating system is to

- a. Avoid thrashing
- b. Provide fast response to each user of the computer
- c. Provide fast execution of processes
- d. Optimize computer memory usage

Options :





- 1.  a
- 2.  b
- 3.  c
- 4.  d

Question Number : 62 Question Id : 2312 Question Type : MCQ Option Shuffling : No
Correct : 1.0 Wrong : 0.33

The hexadecimal representation of the binary number $(1101010.01)_2$ is

- a. $(6A.4)_{16}$
- b. $(6A.1)_{16}$
- c. $(D2.4)_{16}$
- d. $(D2.1)_{16}$

Options :

- 1.  a
- 2.  b
- 3.  c
- 4.  d




Question Number : 63 Question Id : 2313 Question Type : MCQ Option Shuffling : No
Correct : 1.0 Wrong : 0.33

Considering X and Y as binary variables, the Boolean expression $X'Y + X'Y'$ is equivalent to

- a. X
- b. Y
- c. X'
- d. Y'

Options :

- 1.  a





2.  b
3.  c
4.  d

Question Number : 64 Question Id : 2314 Question Type : MCQ Option Shuffling : No
Correct : 1.0 Wrong : 0.33

Which of the following programming languages is mainly popular for business data processing?

- a. C
- b. Pascal
- c. FORTRAN
- d. COBOL

Options :

1.  a
2.  b
3.  c
4.  d

Question Number : 65 Question Id : 2315 Question Type : MCQ Option Shuffling : No
Correct : 1.0 Wrong : 0.33

In cut-paste operation of MS-Word

- a. A text can be cut, and paste exactly once
- b. A text can be cut, and paste multiple times
- c. A text can't be cut if a background color is set
- d. A text can't be cut if its length is more than 128 characters

Options :

1. ✖ a
2. ✔ b
3. ✖ c
4. ✖ d

Question Number : 66 Question Id : 2316 Question Type : MCQ Option Shuffling : No
Correct : 1.0 Wrong : 0.33

Which of the following is a Class-A IP address?

- a. 130.10.10.10
- b. 125.250.250.250
- c. 165.255.255.255
- d. 200.128.128.128

Options :

- 1. ✖ a
- 2. ✔ b
- 3. ✖ c
- 4. ✖ d

Question Number : 67 Question Id : 2317 Question Type : MCQ Option Shuffling : No
Correct : 1.0 Wrong : 0.33

Safari is a

- a. Transport layer protocol
- b. Application layer protocol
- c. Web search engine
- d. Web browser

Options :

- 1. ✖ a
- 2. ✖ b
- 3. ✖ c
- 4. ✔ d

Question Number : 68 Question Id : 2318 Question Type : MCQ Option Shuffling : No
Correct : 1.0 Wrong : 0.33

The projections of an “end point” of a “straight line” lie on XY. The “end point” is situated on:

- a. HP and VP both
- b. VP
- c. HP
- d. Neither HP nor VP

Options :

- 1. ✔ a
- 2. ✖ b
- 3. ✖ c
- 4. ✖ d

Question Number : 69 Question Id : 2319 Question Type : MCQ Option Shuffling : No
Correct : 1.0 Wrong : 0.33

The “male” part of a “socket and spigot” joint is:

- a. Cotter
- b. Socket
- c. Spigot
- d. Eye bolt.

Options :

- 1. ✓ a
- 2. ✗ b
- 3. ✗ c
- 4. ✗ d

For the above question, User had specified 'ignore' during keys upload.

Question Number : 70 Question Id : 2320 Question Type : MCQ Option Shuffling : No

Correct : 1.0 Wrong : 0.33

A map showing “network of roads” has to display distances in units of “miles” and “kilometres” both. Which type of the following types of scale is suitable for this purpose?

- a. Plain scale
- b. diagonal scale
- c. Comparative scale
- d. Vernier scale

Options :

- 1. ✗ a
- 2. ✗ b
- 3. ✓ c
- 4. ✗ d

Question Number : 71 Question Id : 2321 Question Type : MCQ Option Shuffling : No

Correct : 1.0 Wrong : 0.33

What is common to: circle, ellipse, parabola, hyperbola?

- a. Sphere
- b. Cone
- c. Prism
- d. Pyramid.

Options :

- 1. ✗ a
- 2. ✓ b
- 3. ✗ c
- 4. ✗ d

Question Number : 72 Question Id : 2322 Question Type : MCQ Option Shuffling : No

Correct : 1.0 Wrong : 0.33

Isometric projections are commonly drawn with -----iso-axes:

- a. One
- b. Four
- c. Two
- d. Three

Options :

- 1. ✖ a
- 2. ✖ b
- 3. ✖ c
- 4. ✔ d

Question Number : 73 Question Id : 2323 Question Type : MCQ Option Shuffling : No

Correct : 1.0 Wrong : 0.33

An object A of mass m moving with velocity v collides with a second object B of the same mass lying at rest. During the collision, object A transfers its total kinetic energy to object B and comes to rest. After collision, the velocity of object B is

- a. v
- b. $v/2$
- c. $2v$
- d. zero.

Options :

- 1. ✔ a
- 2. ✖ b
- 3. ✖ c
- 4. ✖ d

Question Number : 74 Question Id : 2324 Question Type : MCQ Option Shuffling : No

Correct : 1.0 Wrong : 0.33

A particular place is at a height h above the surface of the earth (radius R). The acceleration due to gravity at that place is proportional to

- a. $(R + h)$
- b. $(R + h)^{-2}$
- c. $(R - h)$
- d. $(R - h)^{-2}$.

Options :

- 1. ✖ a
- 2. ✔ b
- 3. ✖ c
- 4. ✖ d

Question Number : 75 Question Id : 2325 Question Type : MCQ Option Shuffling : No

Correct : 1.0 Wrong : 0.33

A ball of mass m is raised to height h and then dropped to the ground. At what height, kinetic energy of the ball is thrice its potential energy? Neglect air resistance.

- a. $3h/4$
- b. $h/2$
- c. $h/4$
- d. Zero.

Options :

- 1. ✗ a
- 2. ✗ b
- 3. ✓ c
- 4. ✗ d

Question Number : 76 Question Id : 2326 Question Type : MCQ Option Shuffling : No

Correct : 1.0 Wrong : 0.33

In a transverse wave, the particles of the medium move

- a. about their position of rest in a direction parallel to the direction of propagation of disturbance
- b. about their position of rest in a direction perpendicular to the direction of propagation of disturbance
- c. from one place to another in a direction parallel to the direction of propagation of disturbance
- d. from one place to another in a direction perpendicular to the direction of propagation of disturbance.

Options :

- 1. ✗ a
- 2. ✓ b
- 3. ✗ c
- 4. ✗ d

Question Number : 77 Question Id : 2327 Question Type : MCQ Option Shuffling : No

Correct : 1.0 Wrong : 0.33

An object is placed in front of a convex mirror at a distance less than the value of its focal length.

Which of the following best describes the image formed?

- a. real, inverted and magnification greater than one
- b. real, inverted and magnification less than one
- c. virtual, erect and magnification greater than one
- d. virtual, erect and magnification less than one

Options :

- 1. ✗ a
- 2. ✗ b
- 3. ✗ c

4. ✓ d

Question Number : 78 Question Id : 2328 Question Type : MCQ Option Shuffling : No

Correct : 1.0 Wrong : 0.33

A conducting wire has length l and area of cross-section A . The resistivity of its material is ρ and its resistance is R . It is connected in parallel with another wire of the same dimensions but of a resistivity 2ρ . The net resistance of the combination is

- a. R
- b. $2R$
- c. $3R$
- d. $2R/3$.

Options :

- 1. ✗ a
- 2. ✗ b
- 3. ✗ c
- 4. ✓ d

Question Number : 79 Question Id : 2329 Question Type : MCQ Option Shuffling : No

Correct : 1.0 Wrong : 0.33

The number of moles of water in 90 grams of water is

- a. 1
- b. 3
- c. 5
- d. 7

Options :

- 1. ✗ a
- 2. ✗ b
- 3. ✓ c
- 4. ✗ d

Question Number : 80 Question Id : 2330 Question Type : MCQ Option Shuffling : No

Correct : 1.0 Wrong : 0.33

The reactions which involve an exchange of ions between the reactants are known as

- a. Combination
- b. Decomposition
- c. Displacement
- d. Double displacement

Options :

- 1. ✗ a
- 2. ✗ b
- 3. ✗ c
- 4. ✓ d

Question Number : 81 Question Id : 2331 Question Type : MCQ Option Shuffling : No
Correct : 1.0 Wrong : 0.33

Which gas is produced when an acid reacts with sodium carbonate?

- a. Hydrogen
- b. Chlorine
- c. Sulphur dioxide
- d. Carbon dioxide

Options :

- 1. ✖ a
- 2. ✖ b
- 3. ✖ c
- 4. ✔ d

Question Number : 82 Question Id : 2332 Question Type : MCQ Option Shuffling : No
Correct : 1.0 Wrong : 0.33

The ability of an element to exhibit different forms having different physical properties but same chemical properties is known as

- a. Allotropy
- b. Sonorousity
- c. Malleability
- d. Conductivity

Options :

- 1. ✔ a
- 2. ✖ b
- 3. ✖ c
- 4. ✖ d

Question Number : 83 Question Id : 2333 Question Type : MCQ Option Shuffling : No
Correct : 1.0 Wrong : 0.33

A molecule of benzene has

- a. 09 single bonds and 03 double bonds
- b. 12 single bonds and 03 double bonds
- c. 09 single bonds and 06 double bonds
- d. 12 single bonds and 06 double bonds

Options :

- 1. ✔ a
- 2. ✖ b
- 3. ✖ c
- 4. ✖ d

Question Number : 84 Question Id : 2334 Question Type : MCQ Option Shuffling : No
Correct : 1.0 Wrong : 0.33

Latest Sarkari Jobs, Govt Exam Results,
Vacancies and updates on one click

[Know More](#)

The maximum number of electrons that can be accommodated in M shell of an atom is

- a. 2
- b. 8
- c. 18
- d. 32

Options :

- 1. ✖ a
- 2. ✖ b
- 3. ✔ c
- 4. ✖ d

Question Number : 85 Question Id : 2335 Question Type : MCQ Option Shuffling : No

Correct : 1.0 Wrong : 0.33

Which out of the following is not a fossil fuel?

- a. Coal
- b. Light Petroleum Gas
- c. Petrol
- d. Biodiesel

Options :

- 1. ✖ a
- 2. ✖ b
- 3. ✖ c
- 4. ✔ d

Question Number : 86 Question Id : 2336 Question Type : MCQ Option Shuffling : No

Correct : 1.0 Wrong : 0.33

Identify the incorrectly written Class of Vertebrates from among the following

- a. Sparrow, Parakeet, Bat, Eagle
- b. Dolphin, Whale, Elephant, Tiger
- c. Crocodile, Lizard, Snake, Tortoise
- d. Frog Newt, Toad, Salamander

Options :

- 1. ✔ a
- 2. ✖ b
- 3. ✖ c
- 4. ✖ d

Question Number : 87 Question Id : 2337 Question Type : MCQ Option Shuffling : No

Correct : 1.0 Wrong : 0.33

Nerves are bundles of

- a. Nerve cells
- b. axons of neurons
- c. nuclei of neurons
- d. fibres not connected to nerve cells

Options :

- 1. ✗ a
- 2. ✓ b
- 3. ✗ c
- 4. ✗ d

Question Number : 88 Question Id : 2338 Question Type : MCQ Option Shuffling : No

Correct : 1.0 Wrong : 0.33

A boy broke a branch of a Champa tree and planted it. Soon the branch struck roots and started growing .This is an example of

- a. Micro propagation
- b. Sexual reproduction
- c. Vegetative propagation
- d. Artificial propagation

Options :

- 1. ✗ a
- 2. ✗ b
- 3. ✗ c
- 4. ✓ d

Question Number : 89 Question Id : 2339 Question Type : MCQ Option Shuffling : No

Correct : 1.0 Wrong : 0.33

Farmers grow leguminous plants between crops because

- a. they are edible and grow fast
- b. they harbour bacteria in their roots which fix Nitrogen
- c. their short roots absorb much less water
- d. they are easy to grow

Options :

- 1. ✗ a
- 2. ✓ b
- 3. ✗ c
- 4. ✗ d

Question Number : 90 Question Id : 2340 Question Type : MCQ Option Shuffling : No

Correct : 1.0 Wrong : 0.33

What is not true about Chromosomes?

- a. The genes are located on them
- b. Prior to cell division each chromosome is made of two chromatids
- c. They are present inside the nucleus in Eukaryotes
- d. The number of chromosomes differs in different cells of an organism

Options :

- 1. ✗ a
- 2. ✗ b
- 3. ✗ c
- 4. ✓ d

Question Number : 91 Question Id : 2341 Question Type : MCQ Option Shuffling : No

Correct : 1.0 Wrong : 0.33

Is it possible to divide 1000 into two parts such that their HCF is 15

- a. Yes, it is possible
- b. No, it is sometimes possible
- c. Yes, it may be possible
- d. Never possible

Options :

- 1. ✗ a
- 2. ✗ b
- 3. ✗ c
- 4. ✓ d

Question Number : 92 Question Id : 2342 Question Type : MCQ Option Shuffling : No

Correct : 1.0 Wrong : 0.33

The LCM of two prime numbers x and y ($x > y$) is 161. The value of $3y - x$ is

- a. -2
- b. -1
- c. 1
- d. 2

Options :

- 1. ✓ a
- 2. ✗ b
- 3. ✗ c
- 4. ✗ d

Question Number : 93 Question

Correct : 1.0 Wrong : 0.33

Latest Sarkari Jobs, Govt Exam Results,
Vacancies and updates on one click

Know More

The average of 10 numbers is 7. What will be the new average if each of the numbers is multiplied by 8

- a. 45
- b. 52
- c. 56
- d. 55

Options :

- 1. ✖ a
- 2. ✖ b
- 3. ✔ c
- 4. ✖ d

Question Number : 94 Question Id : 2344 Question Type : MCQ Option Shuffling : No

Correct : 1.0 Wrong : 0.33

The average of three consecutive numbers is n . If the next two consecutive numbers are also included, the average of the five numbers will

- a. remains the same
- b. increases by 0.5
- c. increases by 1
- d. increases by 1.5

Options :

- 1. ✖ a
- 2. ✖ b
- 3. ✔ c
- 4. ✖ d

Question Number : 95 Question Id : 2345 Question Type : MCQ Option Shuffling : No

Correct : 1.0 Wrong : 0.33

Divide Rs. 500 among A, B, C and D so that A and B together get thrice as much as C and D together, B gets four times of what C gets and C gets 1.5 times as much as D. Now the value of what B gets is

- a. 300
- b. 75
- c. 125
- d. 150

Options :

- 1. ✔ a
- 2. ✖ b
- 3. ✖ c
- 4. ✖ d

Question Number : 96 Question Id : 2346 Question Type : MCQ Option Shuffling : No

Correct : 1.0 Wrong : 0.33

If Rs. 58 is divided among 150 children such that each girl and each boy gets 25 p and 50 p respectively. Then how many girls are there.

- a. 52
- b. 54
- c. 68
- d. 62

Options :

- 1. ✖ a
- 2. ✖ b
- 3. ✔ c
- 4. ✖ d

Question Number : 97 Question Id : 2347 Question Type : MCQ Option Shuffling : No

Correct : 1.0 Wrong : 0.33

Mr. Alok is worried about the balance of his monthly budget. The price of petrol has increased by 40%. By what percent should he reduce the consumption of petrol so that he is able to balance his budget

- a. 33.33
- b. 28.56
- c. 25
- d. 40

Options :

- 1. ✖ a
- 2. ✔ b
- 3. ✖ c
- 4. ✖ d

Question Number : 98 Question Id : 2348 Question Type : MCQ Option Shuffling : No

Correct : 1.0 Wrong : 0.33

A person purchases 8 pens for Rs. 10 and sells 10 pens for Rs. 8. How much profit or loss does he make

- a. 30 % gain
- b. 30 % loss
- c. 36 % gain
- d. 36 % loss

Options :

- 1. ✖ a
- 2. ✖ b

3. ✖ c

4. ✔ d

Question Number : 99 Question Id : 2349 Question Type : MCQ Option Shuffling : No

Correct : 1.0 Wrong : 0.33

A sells a bicycle to B at a profit of 20 % and B sells it to C at a profit of 25 %.If C pays Rs. 1500, what did A pay for it

- a. Rs. 825
- b. Rs. 1000
- c. Rs. 1100
- d. Rs. 1125

Options :

1. ✖ a

2. ✔ b

3. ✖ c

4. ✖ d

Question Number : 100 Question Id : 2350 Question Type : MCQ Option Shuffling : No

Correct : 1.0 Wrong : 0.33

What will be the simple interest of Rs. 700 at 9 % per annum for the period from February 5, 1994 to April 18, 1994

- a. Rs. 12.60
- b. Rs. 11.30
- c. Rs. 15
- d. Rs. 13

Options :

1. ✔ a

2. ✖ b

3. ✖ c

4. ✖ d

Question Number : 101 Question Id : 2351 Question Type : MCQ Option Shuffling : No

Correct : 1.0 Wrong : 0.33

What will be difference between simple interest and compound interest @ 10 % per annum on a sum of Rs. 1000 after 4 years

- a. Rs. 31
- b. Rs. 32.10
- c. Rs. 40.40
- d. Rs. 64.10

Options :

1. ✖ a

2. ✖ b

3. ✖ c

4. ✔ d

Question Number : 102 Question Id : 2352 Question Type : MCQ Option Shuffling : No

Correct : 1.0 Wrong : 0.33

The minute hand of a big wall-clock is 35 cm long. Taking $\pi = 22/7$, length of the arc, its extremity moves in 18 seconds is

- a. 11 cm
- b. 1.1 cm
- c. 6.6 cm
- d. 6 cm

Options :

1. ✖ a

2. ✔ b

3. ✖ c

4. ✖ d

Question Number : 103 Question Id : 2353 Question Type : MCQ Option Shuffling : No

Correct : 1.0 Wrong : 0.33

Two vessels A and B contains spirit and water mixed in the ratio 5:2 and 7:6 respectively. Find the ratio in which these mixture be mixed to obtain a new mixture in vessel C containing spirit and water in the ratio 8:5

- a. 4:3
- b. 3:4
- c. 5:6
- d. 7:9

Options :

1. ✖ a

2. ✖ b

3. ✖ c

4. ✔ d

Question Number : 104 Question Id : 2354 Question Type : MCQ Option Shuffling : No

Correct : 1.0 Wrong : 0.33

A merchant has 1000 kg of rice, part of which he sells at 8% profit and the rest at 16 % profit. He gains 14 % on the whole. The quantity sold at 16 % profit is

- a. 500 kg
- b. 650 kg
- c. 750 kg
- d. 800 kg

Options :

1. ✖ a

2. ✖ b

3. ✓ c

4. ✗ d

Question Number : 105 Question Id : 2355 Question Type : MCQ Option Shuffling : No

Correct : 1.0 Wrong : 0.33

If $(x+1)$ and $(x-2)$ be the factors of $x^3 + (a+1)x^2 - (b-2)x - 6$, then the value of a and b will be

a. 2 and 8

b. 1 and 7

c. 5 and 3

d. 3 and 7

Options :

1. ✗ a

2. ✓ b

3. ✗ c

4. ✗ d

Question Number : 106 Question Id : 2356 Question Type : MCQ Option Shuffling : No

Correct : 1.0 Wrong : 0.33

If $f(x) = 4x^3 - 2x^2 + 5x - 8$ is divided by $x-2$, what will be the remainder

a. 25

b. 42

c. 16

d. 26

Options :

1. ✗ a

2. ✗ b

3. ✗ c

4. ✓ d

Question Number : 107 Question Id : 2357 Question Type : MCQ Option Shuffling : No

Correct : 1.0 Wrong : 0.33

A tower is 30m high. An observer from the top of the tower makes an angle of depression 60° at the base of the building and angle of depression of 45° at the top of the building, what is the height of the building (in metres)

a. 18

b. 15.68

c. $10\sqrt{3}$

d. 12.68

Options :

1. ✗ a

2. ✗ b

3. ✖ c

4. ✔ d

Question Number : 108 Question Id : 2358 Question Type : MCQ Option Shuffling : No

Correct : 1.0 Wrong : 0.33

Find the sum of an AP of 40 terms whose first and last terms are 80 and 275

a. 8400

b. 7200

c. 7100

d. 4800

Options :

1. ✖ a

2. ✖ b

3. ✔ c

4. ✖ d

Question Number : 109 Question Id : 2359 Question Type : MCQ Option Shuffling : No

Correct : 1.0 Wrong : 0.33

The common ratio of a GP is $-\frac{4}{5}$ and the sum to infinity is $\frac{80}{9}$. Find the first term.

a. 14

b. 16

c. 18

d. 10

Options :

1. ✖ a

2. ✔ b

3. ✖ c

4. ✖ d

Question Number : 110 Question Id : 2360 Question Type : MCQ Option Shuffling : No

Correct : 1.0 Wrong : 0.33

4 men and 3 women finish a job in 6 days. And 5 men and 7 women can do the same job in 4 days. How long will 1 man and 1 women take to do the work.

a. $22\frac{2}{7}$ days

b. $25\frac{1}{2}$ days

c. $5\frac{1}{7}$ days

d. $12\frac{7}{22}$ days

Options :

1. ✔ a

2. ✖ b

3. ✖ c

4. ✖ d

Question Number : 111 Question Id : 2361 Question Type : MCQ Option Shuffling : No

Correct : 1.0 Wrong : 0.33

A can do a work in 15 days and B in 20 days. If they work on it together for 4 days, then the fraction of the work that is left is

- a. $\frac{1}{4}$
- b. $\frac{1}{10}$
- c. $\frac{7}{15}$
- d. $\frac{8}{15}$

Options :

- 1. ✗ a
- 2. ✗ b
- 3. ✗ c
- 4. ✓ d

Question Number : 112 Question Id : 2362 Question Type : MCQ Option Shuffling : No

Correct : 1.0 Wrong : 0.33

Two trains, Kolkata Mail and Patna Mail, start at the same time from stations Kolkata and Patna respectively towards each other. After passing each other, they take 12 hours and 3 hours to reach Patna and Kolkata respectively. If the Kolkata Mail is moving at the speed of 48 km/h, the speed of the Patna Mail is

- a. 24 km/h
- b. 22 km/h
- c. 21 km/h
- d. 96 km/h

Options :

- 1. ✗ a
- 2. ✗ b
- 3. ✗ c
- 4. ✓ d

Question Number : 113 Question Id : 2363 Question Type : MCQ Option Shuffling : No

Correct : 1.0 Wrong : 0.33

Abhishek is travelling on his cycle and has calculated to reach point A at 2 pm if he travels at 10 km/h; he will reach there at 12 noon if he travels at 15 km/h. At what speed must he travel to reach A at 1 pm

- a. 8 km/h
- b. 11 km/h
- c. 12 km/h
- d. 14 km/h

Options :

- 1. ✗ a
- 2. ✗ b
- 3. ✓ c

4. ✖ d

Question Number : 114 Question Id : 2364 Question Type : MCQ Option Shuffling : No

Correct : 1.0 Wrong : 0.33

A motorcycle travels 20 km an hour faster than a cycle over a journey of 600 km. The cycle takes 50 hours more than the motorcycle. Find their speed (in km/h)

- a. 40, 60
- b. 20, 60
- c. 20, 40
- d. 45, 100

Options :

- 1. ✖ a
- 2. ✖ b
- 3. ✔ c
- 4. ✖ d

Question Number : 115 Question Id : 2365 Question Type : MCQ Option Shuffling : No

Correct : 1.0 Wrong : 0.33

If $x = a(b-c)$, $y = b(c-a)$ and $z = c(a-b)$, then $(x/a)^3 + (y/b)^3 + (z/c)^3$

- a. $3xyz/abc$
- b. xyz/abc
- c. $3xyzabc$
- d. 3

Options :

- 1. ✔ a
- 2. ✖ b
- 3. ✖ c
- 4. ✖ d

Question Number : 116 Question Id : 2366 Question Type : MCQ Option Shuffling : No

Correct : 1.0 Wrong : 0.33

Consider the following foreign visitors to India:

1. Alberuni 2. Fahein 3. Hieun Tsang 4. Megasthenese

The correct chronological order in which these persons visited India is

- a. 4-3-1-2
- b. 2-4-3-1
- c. 4-2-3-1
- d. 1-2-4-3

Options :

- 1. ✖ a
- 2. ✖ b
- 3. ✔ c

4. ✖ d

Question Number : 117 Question Id : 2367 Question Type : MCQ Option Shuffling : No

Correct : 1.0 Wrong : 0.33

Who was the last ruler of Tuglaq dynasty of the Delhi Sultanate?

- a. Firoz Shah Tuglaq
- b. Giasuddin Tuglaq II
- c. Mahmud Shah Tuglaq
- d. Nasrat Shah

Options :

1. ✖ a

2. ✖ b

3. ✔ c

4. ✖ d

Question Number : 118 Question Id : 2368 Question Type : MCQ Option Shuffling : No

Correct : 1.0 Wrong : 0.33

Which of the following pairs is not correctly matched?

- a. Poorna Swaraj Resolution:1929
- b. Martyrdom of Sardar Bhagat Singh:1931
- c. Formation of Congress Socialist Party:1938
- d. Shimla Conference:1945

Options :

1. ✖ a

2. ✖ b

3. ✔ c

4. ✖ d

Question Number : 119 Question Id : 2369 Question Type : MCQ Option Shuffling : No

Correct : 1.0 Wrong : 0.33

Match List 1 with List 2 and select the correct answer from the codes given below in the list

List 1(Towns)

- A. Jabalpur
- B. Paris
- C. London
- D. Lahore

List 2(Rivers)

- 1. Ravi
- 2. Narmada
- 3. Siene
- 4. Thames

- | | | | | |
|----|-----|------|------|------|
| a. | A-2 | B- 3 | C- 4 | D-1 |
| b. | A-3 | B- 2 | C- 1 | D- 4 |
| c. | A-1 | B-4 | C-3 | D- 2 |
| d. | A-4 | B-1 | C-2 | D-3 |

Options :

- 1. ✓ a
- 2. ✗ b
- 3. ✗ c
- 4. ✗ d

Question Number : 120 Question Id : 2370 Question Type : MCQ Option Shuffling : No
Correct : 1.0 Wrong : 0.33

Which one of the following sequence correctly represents the percentage of given salt in sea water in decreasing order

- a. Magnesium Chloride-Sodium Chloride-Magnesium Sulphate-Calcium Sulphate
- b. Magnesium Sulphate-Magnesium Chloride-Calcium Sulphate-Sodium Chloride
- c. Sodium Chloride-Magnesium Chloride-Magnesium Sulphate-Calcium Sulphate
- d. Sodium chloride-Magnesium Sulphate-Magnesium Chloride-Calcium Sulphate

Options :

- 1. ✗ a
- 2. ✗ b
- 3. ✓ c
- 4. ✗ d

Question Number : 121 Question Id : 2371 Question Type : MCQ Option Shuffling : No
Correct : 1.0 Wrong : 0.33

The large states of India in order of area are

- a. Rajasthan, Madhya Pradesh, Maharashtra
- b. Madhya Pradesh, Rajasthan, Maharashtra
- c. Maharashtra, Rajasthan, Madhya Pradesh
- d. Madhya Pradesh, Maharashtra, Rajasthan

Options :

- 1. ✓ a
- 2. ✗ b
- 3. ✗ c
- 4. ✗ d

Question Number : 122 Question Id : 2372 Question Type : MCQ Option Shuffling : No

Correct : 1.0 Wrong : 0.33

The best and poorest conductor of heat are respectively

- a. silver and lead
- b. copper and aluminium
- c. silver and gold
- d. copper and gold

Options :

- 1. ✓ a
- 2. ✗ b
- 3. ✗ c
- 4. ✗ d

Question Number : 123 Question Id : 2373 Question Type : MCQ Option Shuffling : No

Correct : 1.0 Wrong : 0.33

An athlete driving off a high spring board can perform a variety of exercises in the air before entering the water below. Which of the following parameter of the athlete will remain constant during the fall

- a. The athlete's linear momentum
- b. The athlete's moment of inertia
- c. The athlete's kinetic energy
- d. The athlete's angular momentum

Options :

- 1. ✗ a
- 2. ✗ b
- 3. ✗ c
- 4. ✓ d

Question Number : 124 Question Id : 2374 Question Type : MCQ Option Shuffling : No

Correct : 1.0 Wrong : 0.33

The ratio of transverse deformation to longitudinal deformation is called

- a. Poisson Ratio
- b. Bulk modulus
- c. Young's modulus
- d. Modulus of rigidity

Options :

- 1. ✓ a
- 2. ✗ b
- 3. ✗ c
- 4. ✗ d

Question Number : 125 Question Id : 2375 Question Type : MCQ Option Shuffling : No

Correct : 1.0 Wrong : 0.33

If the finance minister fails to get the Annual Budget passed in the Lok Sabha , the Prime Minister is expected to

- a. Compel the Finance Minister to resign
- b. Submit the resignation of his /her cabinet
- c. Refer it to the joint session of both the Houses of Parliament
- d. Form another cabinet with different members

Options :

- 1. ✗ a
- 2. ✓ b
- 3. ✗ c
- 4. ✗ d

Question Number : 126 Question Id : 2376 Question Type : MCQ Option Shuffling : No

Correct : 1.0 Wrong : 0.33

The right to property was removed from the list of fundamental Rights enlisted in the constitution of the India through which one of the Following Amendments?

- a. 42nd Amendment
- b. 44 th Amendment
- c. 46 th Amendment
- d. 47 th Amendment

Options :

- 1. ✗ a
- 2. ✓ b
- 3. ✗ c
- 4. ✗ d

Question Number : 127 Question Id : 2377 Question Type : MCQ Option Shuffling : No

Correct : 1.0 Wrong : 0.33

When was the concept of the Human Development Index (HDI) introduced by the United Nations Development Programme?

- a. 1990
- b. 1991
- c. 1993
- d. 1995

Options :

- 1. ✓ a
- 2. ✗ b
- 3. ✗ c
- 4. ✗ d

Question Number : 128 Question Id : 2378 Question Type : MCQ Option Shuffling : No
Correct : 1.0 Wrong : 0.33

Tarapore Committee was associated with which one of the following

- a. Special Economic Zone
- b. Fully capital Account Convertibility
- c. Effect of oil-price on the Indian Economy
- d. Foreign Exchange Reserve

Options :

- 1. ✗ a
- 2. ✓ b
- 3. ✗ c
- 4. ✗ d

Question Number : 129 Question Id : 2379 Question Type : MCQ Option Shuffling : No
Correct : 1.0 Wrong : 0.33

MODVAT is related to

- a. Sales Tax
- b. Wealth Tax
- c. Income Tax
- d. Excise Duty

Options :

- 1. ✗ a
- 2. ✗ b
- 3. ✗ c
- 4. ✓ d

Question Number : 130 Question Id : 2380 Question Type : MCQ Option Shuffling : No
Correct : 1.0 Wrong : 0.33

The term "bogey" is associated with

- a. Tennis
- b. Golf
- c. Baseball
- d. Chess

Options :

- 1. ✖ a
- 2. ✔ b
- 3. ✖ c
- 4. ✖ d

Question Number : 131 Question Id : 2381 Question Type : MCQ Option Shuffling : No

Correct : 1.0 Wrong : 0.33

The ancient Olympic continued till about

- a. Robert Dover
- b. Pierre de Coubertin
- c. Theodosius I
- d. Ernest Curtis

Options :

- 1. ✖ a
- 2. ✖ b
- 3. ✔ c
- 4. ✖ d

Question Number : 132 Question Id : 2382 Question Type : MCQ Option Shuffling : No

Correct : 1.0 Wrong : 0.33

Red blood corpuscles is produced into

- a. Spleen
- b. Kidney
- c. Liver
- d. Bone marrow

Options :

- 1. ✖ a
- 2. ✖ b
- 3. ✖ c
- 4. ✔ d

Question Number : 133 Question Id : 2383 Question Type : MCQ Option Shuffling : No

Correct : 1.0 Wrong : 0.33

Which of the following parts of human brain is the regulating centre for swallowing and vomiting

- a. Cerebellum
- b. Cerebrum
- c. Medulla oblongata
- d. Pones

Options :

- 1. ✖ a
- 2. ✖ b
- 3. ✔ c
- 4. ✖ d

Question Number : 134 Question Id : 2384 Question Type : MCQ Option Shuffling : No

Correct : 1.0 Wrong : 0.33

Match List-I (Diseases) with List-II (Types of diseases) and select the correct answer using codes

List-I

- A. Haemophilia
- B. Diabetes
- C. Rickets
- D. Ringworm

List-II

- 1. Deficiency disease
- 2. Genetic disease
- 3. Hormonal disorder
- 4. Fungal infection

- | | | | |
|---------|------|-----|------|
| a. A- 2 | B-3 | C-4 | D- 1 |
| b. A-2 | B- 3 | C-1 | D-4 |
| c. A-3 | B- 2 | C-1 | D- 4 |
| d. A-3 | B-2 | C-4 | D-1 |

Options :

- 1. ✖ a
- 2. ✔ b
- 3. ✖ c
- 4. ✖ d

Question Number : 135 Question Id : 2385 Question Type : MCQ Option Shuffling : No

Correct : 1.0 Wrong : 0.33

Which of the following gases will have the highest rate of diffusion

- a. O_2
- b. CO_2
- c. NH_3
- d. N_2

Options :

1. ✖ a
2. ✖ b
3. ✔ c
4. ✖ d

Question Number : 136 Question Id : 2386 Question Type : MCQ Option Shuffling : No
Correct : 1.0 Wrong : 0.33

Which one of the following is not a strong electrolyte

- a. NaCl
- b. KNO₃
- c. NH₄OH
- d. FeSO₄

Options :

1. ✖ a
2. ✖ b
3. ✔ c
4. ✖ d

Question Number : 137 Question Id : 2387 Question Type : MCQ Option Shuffling : No
Correct : 1.0 Wrong : 0.33

Which of the following is not a colloid

- a. Chlorophyll
- b. Smoke
- c. Ruby glass
- d. Milk

Options :

1. ✔ a
2. ✖ b
3. ✖ c
4. ✖ d

Question Number : 138 Question Id : 2388 Question Type : MCQ Option Shuffling : No
Correct : 1.0 Wrong : 0.33

The government has approved setting up of how many ITBP outposts along the china border in Arunachala Pradesh and Sikkim?

- a. 30
- b. 35
- c. 42
- d. 45

Options :

1. ✖ a
2. ✖ b

3. ✓ c

4. ✗ d

Question Number : 139 Question Id : 2389 Question Type : MCQ Option Shuffling : No

Correct : 1.0 Wrong : 0.33

Mark Rutte ,who visited in India in June 2015 ,is prime minister of

- a. Sweden
- b. Norway
- c. Netherlands
- d. Belarus

Options :

1. ✗ a

2. ✗ b

3. ✓ c

4. ✗ d

Question Number : 140 Question Id : 2390 Question Type : MCQ Option Shuffling : No

Correct : 1.0 Wrong : 0.33

Union Cabinet on June 17 , 2015 approved housing for all scheme by

- a. 2025
- b. 2022
- c. 2018
- d. 2030

Options :

1. ✗ a

2. ✓ b

3. ✗ c

4. ✗ d

Question Number : 141 Question Id : 2391 Question Type : MCQ Option Shuffling : No

Correct : 1.0 Wrong : 0.33

Pointing to a photograph, a man said, “Her brother’s father is the only son of my grandfather.” How is the person in the photograph related to the man?

- a. Brother
- b. Aunt
- c. Mother
- d. Sister

Options :

1. ✗ a

2. ✗ b

3. ✗ c

4. ✓ d

Question Number : 142 Question

Latest Sarkari Jobs, Govt Exam Results,
Vacancies and updates on one click

Know More

Correct : 1.0 Wrong : 0.33

Three of the four number-pairs in the alternatives have numbers which hold the same relationship as the numbers in the number-pair given below. Find out the number-pair in which the two numbers do not hold the same relationship as the two numbers in the number-pair below.

12 : 72

- a. 8 : 32
- b. 10 : 50
- c. 4 : 12
- d. 6 : 18

Options :

- 1. ✖ a
- 2. ✖ b
- 3. ✔ c
- 4. ✖ d

Question Number : 143 Question Id : 2393 Question Type : MCQ Option Shuffling : No

Correct : 1.0 Wrong : 0.33

‘Length’ is related to ‘Metre’ the same way as ‘Volume’ is related to:

- a. Quantity
- b. Litre
- c. Kilogram
- d. Mass

Options :

- 1. ✖ a
- 2. ✔ b
- 3. ✖ c
- 4. ✖ d

Question Number : 144 Question Id : 2394 Question Type : MCQ Option Shuffling : No

Correct : 1.0 Wrong : 0.33

Six plays A, B, C, D, E and F are staged one on each day from Monday to Saturday. B is staged one day after E. A is not staged on the last day. D is staged on Thursday and is not immediately preceded by E. F is not staged on the last day and does not immediately follow D.

Which play is staged on Friday?

- a. A
- b. F
- c. C
- d. B

Options :

1. ✓ a
2. ✗ b
3. ✗ c
4. ✗ d

Question Number : 145 Question Id : 2395 Question Type : MCQ Option Shuffling : No

Correct : 1.0 Wrong : 0.33

Arrange the following words in a meaningful logical sequence and choose the appropriate number sequence from the alternatives.

1. Cow 2. Grasshopper 3. Cat 4. Elephant 5. Ant 6. Calf

- a. 4, 1, 6, 2, 3, 5
- b. 5, 2, 6, 3, 1, 4
- c. 5, 2, 3, 6, 1, 4
- d. 5, 2, 6, 3, 4, 1

Options :

1. ✗ a
2. ✗ b
3. ✓ c
4. ✗ d

Question Number : 146 Question Id : 2396 Question Type : MCQ Option Shuffling : No

Correct : 1.0 Wrong : 0.33

One term in the following number series is wrong. Find out the wrong term.

3, 5, 8, 13, 21, 33, 55

- a. 8
- b. 13
- c. 21
- d. 33

Options :

1. ✓ a
2. ✗ b
3. ✗ c
4. ✗ d

For the above question, User had specified 'ignore' during keys upload.

Question Number : 147 Question Id : 2397 Question Type : MCQ Option Shuffling : No

Correct : 1.0 Wrong : 0.33

In a certain code, '537' means 'good intelligent boy'; '859' means 'bright young boy' and '472' means 'intelligent old student'. Which digit means 'good' in that code?

- a. 3
- b. 6
- c. 8
- d. 4

Options :

- 1. ✓ a
- 2. ✗ b
- 3. ✗ c
- 4. ✗ d

Question Number : 148 Question Id : 2398 Question Type : MCQ Option Shuffling : No

Correct : 1.0 Wrong : 0.33

In a certain language, 'MASTER' is coded as 'MSERTA', then in that language, 'BANKER' would be coded as:

- a. BNERAK
- b. BNERKA
- c. BENKRA
- d. RKABNE

Options :

- 1. ✗ a
- 2. ✓ b
- 3. ✗ c
- 4. ✗ d

Question Number : 149 Question Id : 2399 Question Type : MCQ Option Shuffling : No

Correct : 1.0 Wrong : 0.33

A man is facing North. He turns 45° in clockwise direction and then turns 180° in anticlockwise direction. Finally, he turns 90° in clockwise direction. Which direction is he facing now?

- a. West
- b. South-East
- c. South-West
- d. North-West

Options :

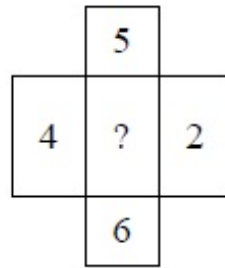
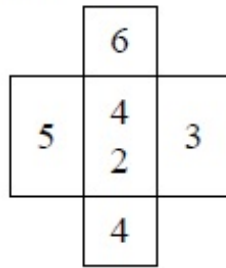
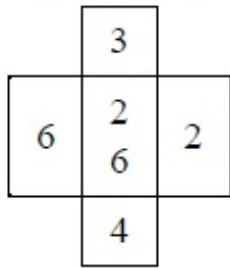
- 1. ✗ a
- 2. ✗ b
- 3. ✗ c

4. ✓ d

Question Number : 150 Question Id : 2400 Question Type : MCQ Option Shuffling : No

Correct : 1.0 Wrong : 0.33

The numbers in the following figures follow a pattern. Find the number which will replace the question mark



- a. 36
- b. 34
- c. 32
- d. 28

Options :

- 1. ✗ a
- 2. ✗ b
- 3. ✓ c
- 4. ✗ d



Latest Sarkari jobs, Govt Exam alerts, Results and Vacancies

- ▶ Latest News and Notification
- ▶ Exam Paper Analysis
- ▶ Topic-wise weightage
- ▶ Previous Year Papers with Answer Key
- ▶ Preparation Strategy & Subject-wise Books

To know more [Click Here](#)



www.prepp.in