

4. A particle is released at a height equal to radius of the earth above the surface of the earth. Its velocity when it hits the surface of earth is equal to (M_e : mass of earth, R_e : Radius of earth)

(1) $v = \sqrt{\frac{2GM_e}{R_e}}$ (2) $v = \sqrt{\frac{GM_e}{2R_e}}$
 (3) $v = \sqrt{\frac{GM_e}{R_e}}$ (4) $v = \sqrt{\frac{2GM_e}{3R_e}}$

Answer (3)

Sol. Using energy conservation.

$$-\frac{GMm}{2R_e} = -\frac{GMm}{R_e} + \frac{1}{2}mv^2$$

$$v = \sqrt{\frac{GM_e}{R_e}}$$

5. A faulty scale reads 5°C at melting point and 95°C at steam point.

Find original temperature if this faulty scale reads 41°C .

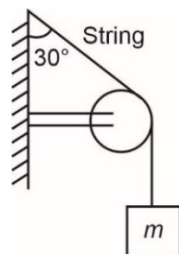
- (1) 40°C (2) 41°C
 (3) 36°C (4) 45°C

Answer (1)

Sol. $\frac{41-5}{95-5} = \frac{x-0}{100-0}$

$\Rightarrow 9x = 360$
 $\Rightarrow x = 40$

6. A block stays in equilibrium as shown:



Find the tension in the string if $m = \sqrt{3}$ kg

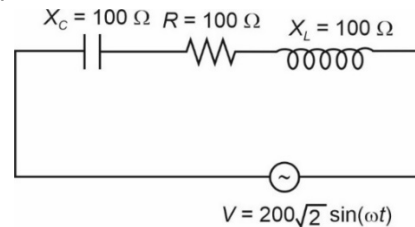
- (1) $\sqrt{3}g$ N (2) $3g$ N
 (3) $\frac{g}{2}$ N (4) $\frac{g}{\sqrt{3}}$ N

Answer (1)

Sol. Since block in equilibrium

$\Rightarrow T = mg$
 $\Rightarrow T = \sqrt{3}g$

7. In the AC circuit shown in the figure the value of I_{rms} is equal to



- (1) 2A (2) $2\sqrt{2}$ A
 (3) 4A (4) $\sqrt{2}$ A

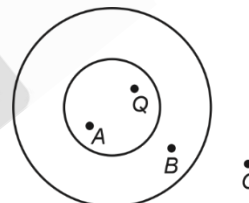
Answer (1)

Sol. $Z = \sqrt{R^2 + (X_L - X_C)^2}$
 $= \sqrt{100^2 + (100 - 100)^2} = 100 \Omega$

So, $i_0 = \frac{200\sqrt{2}}{100} = 2\sqrt{2}$

So, $i_{\text{rms}} = \frac{i_0}{\sqrt{2}} = 2\text{A}$

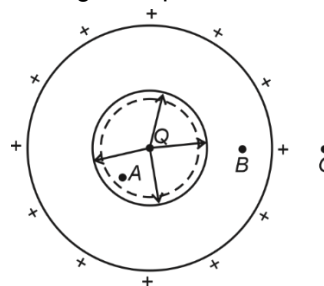
8. A point charge Q is placed inside the cavity made in uniform conducting solid sphere as shown. E_A , E_B and E_C are electric field magnitudes at points A , B and C respectively, Then



- (1) $E_A = 0, E_B = 0$ and $E_C \neq 0$
 (2) $E_A \neq 0, E_B = 0$ and $E_C \neq 0$
 (3) $E_A \neq 0, E_B \neq 0$ and $E_C = 0$
 (4) $E_A \neq 0, E_B \neq 0$ and $E_C \neq 0$

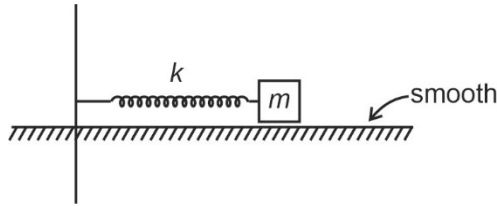
Answer (2)

Sol. Taking Q as positive



$E_A \neq 0$ (electric field due to both Q and induced charge on the inner surface of cavity)
 $E_B = 0$ (No field line inside conductor)
 $E_C \neq 0$ (electric field due to charge induced on outer surface of conductor).

9. In the shown mass-spring system when it is set into oscillations along the spring, it has angular frequency ω_1 , when $m = 1$ kg and ω_2 if $m = 2$ kg. Then value of $\frac{\omega_1}{\omega_2}$ is equal to



- (1) 1 (2) $\sqrt{2}$
 (3) $\frac{1}{\sqrt{2}}$ (4) 2

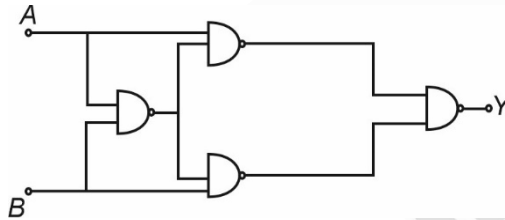
Answer (2)

Sol. $\omega_1 = \sqrt{\frac{k}{m}} = \sqrt{\frac{k}{1}}$

$\omega_2 = \sqrt{\frac{k}{m}} = \sqrt{\frac{k}{2}}$

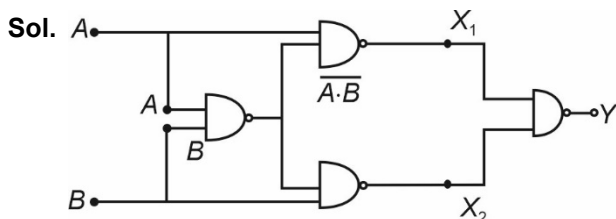
So $\frac{\omega_1}{\omega_2} = \sqrt{\frac{k}{k/2}} = \sqrt{2}$

10. For the given logic circuit which of the following truth table is correct?



- | | | | |
|-----|---|---|---|
| (1) | A | B | Y |
| | 0 | 0 | 0 |
| | 0 | 1 | 1 |
| | 1 | 0 | 1 |
| | 1 | 1 | 0 |
- | | | | |
|-----|---|---|---|
| (2) | A | B | Y |
| | 0 | 0 | 1 |
| | 0 | 1 | 0 |
| | 1 | 0 | 0 |
| | 1 | 1 | 1 |
- | | | | |
|-----|---|---|---|
| (3) | A | B | Y |
| | 0 | 0 | 1 |
| | 0 | 1 | 1 |
| | 1 | 0 | 1 |
| | 1 | 0 | 0 |
- | | | | |
|-----|---|---|---|
| (4) | A | B | Y |
| | 0 | 0 | 0 |
| | 0 | 1 | 0 |
| | 1 | 0 | 0 |
| | 1 | 1 | 1 |

Answer (1)



$$\begin{aligned} X_1 &= A \cdot (\overline{A \cdot B}) \cdot B \cdot (\overline{A \cdot B}) \\ &= A \cdot (\overline{AB}) + B \cdot (\overline{AB}) \\ &= A \cdot (\overline{A} + \overline{B}) + B \cdot (\overline{A} + \overline{B}) \\ &= \overline{A}B + B\overline{A} \\ &= \text{XOR gate} \end{aligned}$$

A	B	Y
0	0	0
0	1	1
1	0	1
1	1	0

11. A particle of mass m is moving under a force whose delivered power P is constant. Initial velocity of particle is zero. Find position of particle at $t = 4$ s.

- (1) $x = \frac{16}{3} \sqrt{\frac{2P}{m}}$ (2) $x = \frac{4}{3} \sqrt{\frac{2P}{m}}$
 (3) $x = \frac{2}{3} \sqrt{\frac{P}{m}}$ (4) $x = \frac{3}{10} \sqrt{\frac{P}{m}}$

Answer (1)

Sol. $P = \frac{W}{t}$
 $\Rightarrow \frac{1}{2}mv^2 = P \cdot t$
 $\Rightarrow v = \sqrt{\frac{2Pt}{m}} = \frac{dx}{dt}$
 $\Rightarrow x = \frac{16}{3} \sqrt{\frac{2P}{m}}$

12. Column-I list few physical quantities and column-II lists their dimensions. Choose the correct option matching the two lists correctly

Column-I	Column-II
(P) Pressure gradient	(A) $[M^1L^2T^{-2}]$
(Q) Energy density	(B) $[M^1L^1T^{-1}]$
(R) Torque	(C) $[M^1L^{-2}T^{-2}]$
(S) Impulse	(D) $[M^1L^{-1}T^{-2}]$
(1) P-C, Q-A, R-B, S-D	(2) P-C, Q-D, R-A, S-B
(3) P-A, Q-D, R-B, S-C	(4) P-A, Q-C, R-B, S-D

Answer (2)

Sol. [Pressure gradient] $\Rightarrow \left[\frac{dp}{dz} \right] = \left[\frac{ML^{-1}T^{-2}}{L} \right]$
 $= [ML^{-2}T^{-2}]$

$$[\text{Energy density}] \Rightarrow \left[\frac{dU}{dV} \right] = \left[\frac{ML^2T^{-2}}{L^3} \right] = [ML^{-1}T^{-2}]$$

$$[\text{Torque}] \Rightarrow [F] \times [r] = [MLT^{-2}] \times [L] = [ML^2T^{-2}]$$

$$[\text{Impulse}] \Rightarrow [F] [t] = [MLT^{-2}] [T] = [MLT^{-1}]$$

So, P → C, Q → D, R → A, S → B

13. Consider the following assertion & reason:

Assertion (A): At sink temperature of -273°C , the efficiency of a Carnot engine will be 1.

Reason (R): Efficiency of a Carnot engine is given

$$\text{by } \eta = 1 - \frac{T_{\text{sink}}}{T_{\text{Source}}}$$

- (1) (A) is correct, (R) is correct and correctly explains A
- (2) (A) is not correct, (R) is correct
- (3) Both (A) & (R) are incorrect
- (4) Both (A) & (R) are correct, (R) does not explain (A)

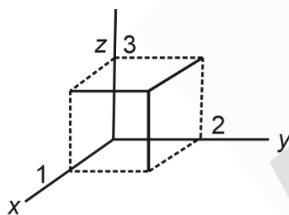
Answer (1)

Sol. $\eta = 1 - \frac{T_{\text{sink}}}{T_{\text{Source}}}$

If $T_{\text{sink}} = 0 \text{ K} \Rightarrow \eta = 1$

14. Electric field in a region is

$$\vec{E} = 2x^2\hat{i} - 4y\hat{j} + 6z\hat{k}$$



Find the charge inside the cuboid shown:

- (1) $-8\epsilon_0$
- (2) $36\epsilon_0$
- (3) $12\epsilon_0$
- (4) $24\epsilon_0$

Answer (4)

Sol. $\phi_{\text{total}} = 2(1)^2[2 \times 3] - 4(2)[1 \times 3] + 6(3)[1 \times 2]$
 $= 12 - 24 + 36$
 $= 24$

$$\Rightarrow \frac{q}{\epsilon_0} = 24$$

$$\Rightarrow q = 24\epsilon_0$$

15. Find the ratio of de Broglie wavelength of proton, when it is accelerated across v and $3v$ potential difference.

- (1) 3 : 1
- (2) $1 : \sqrt{3}$
- (3) 1 : 3
- (4) $\sqrt{3} : 1$

Answer (4)

Sol. When proton is accelerated by potential difference V , the linear momentum of proton

$$\frac{p^2}{2m} = eV$$

$$p = \sqrt{2meV} \Rightarrow \lambda_1 = \frac{h}{\sqrt{2meV}}$$

When accelerated by potential difference of $3V$, then linear momentum of proton is

$$\frac{p^2}{2m} = 3eV$$

$$p = \sqrt{6meV} \Rightarrow \lambda_2 = \frac{h}{\sqrt{6meV}}$$

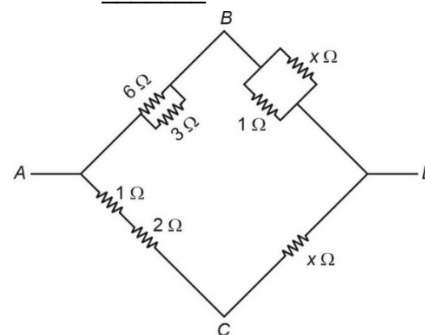
$$\frac{\lambda_1}{\lambda_2} = \sqrt{3}$$

- 16.
- 17.
- 18.
- 19.
- 20.

SECTION - B

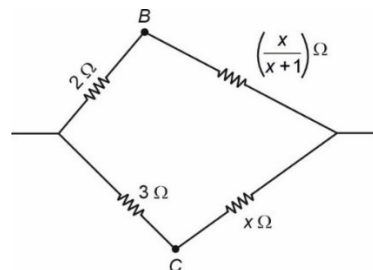
Numerical Value Type Questions: This section contains 10 questions. In Section B, attempt any five questions out of 10. The answer to each question is a **NUMERICAL VALUE**. For each question, enter the correct numerical value (in decimal notation, truncated/rounded-off to the second decimal place; e.g. 06.25, 07.00, -00.33, -00.30, 30.27, -27.30) using the mouse and the on-screen virtual numeric keypad in the place designated to enter the answer.

21. For the given electrical circuit, the potential difference between points B and C is zero. The value of x is _____.



Answer (00.50)

Sol.



$$V_B = V_C$$

$$\text{then } \frac{2}{3} = \frac{\left(\frac{x}{x+1}\right)}{x}$$

$$\Rightarrow \frac{2}{3} = \frac{1}{x+1}$$

$$x+1 = \frac{3}{2}$$

$$\Rightarrow x = \frac{1}{2} \Omega$$

22. Two waves of same intensity from sources in phase are made to superimpose at a point. If path difference between these two coherent waves is zero then resultant intensity is I_0 . If this path difference is $\frac{\lambda}{2}$ where λ is wavelength of these waves, then resultant intensity is I_1 and if the path difference is $\frac{\lambda}{4}$ then resultant intensity is I_2 . Value of $\frac{I_1 + I_2}{I_0}$ is equal to

Answer (00.50)

Sol. Let individual intensity from source is I thus

$$I_0 = I + I + 2\sqrt{I \times I} \cos\left(0 \times \frac{2\pi}{\lambda}\right)$$

$$\Rightarrow I_0 = 4I$$

$$I_1 = I + I + 2\sqrt{I \times I} \cos\left(\frac{\lambda}{2} \times \frac{2\pi}{\lambda}\right)$$

$$\Rightarrow I_1 = 0$$

$$I_2 = I + I + 2\sqrt{I \times I} \cos\left(\frac{\lambda}{4} \times \frac{2\pi}{\lambda}\right)$$

$$\Rightarrow I_2 = 2I$$

$$\text{So, } \frac{I_1 + I_2}{I_0} = \frac{1}{2} \text{ or } 0.5$$

23. A bullet (mass 10 grams) is fired from a gun (mass 10 kg without the bullet) with a speed of 100 m/s.

The recoil speed of gun is $\frac{x}{10}$ m/s. Find x .

Answer (1)

Sol. Conserving momentum

$$10 \times V = \frac{10}{1000} \times 100$$

$$\Rightarrow V = \frac{1}{10} \text{ m/s}$$

24. The ratio of temperature (in K) of hydrogen and oxygen is 2 : 1. The ratio of their average kinetic energy per molecule is

Answer (02.00)

Sol. Average kinetic energy = $\frac{f}{2} K_B T$

$$\frac{(\text{Average kinetic energy})_{H_2}}{(\text{Average kinetic energy})_{O_2}} = \frac{T_{H_2}}{T_{O_2}} = \left(\frac{2}{1}\right)$$

25. The relation between velocity (v) and position (x) of a particle moving along x -axis is given by $4v^2 = 50 - x^2$. The time period of the oscillatory motion of the particle is $\frac{88}{n}$ seconds.

Find n [use $\pi = \frac{22}{7}$]

Answer (07.00)

Sol. $4v^2 = 50 - x^2$

$$v^2 = \frac{1}{4}(50 - x^2)$$

$$v = \frac{1}{2}\sqrt{50 - x^2}$$

Comparing equation of S.H.M.

$$v = \omega\sqrt{A^2 - x^2}$$

$$A^2 = 50$$

$$A = \sqrt{50} = 5\sqrt{2}$$

$$\omega = \frac{1}{2} = 0.5 \text{ rad/sec}$$

$$T = \frac{2\pi}{\omega} = \frac{2\pi}{0.5} = 4\pi \text{ second}$$

$$\pi = \left(\frac{22}{7}\right)$$

$$T = \frac{88}{7} = \frac{88}{n}$$

So, $n = 7$

26. Prism A has angle of prism equal to 6° and its material has refractive index 1.5. It is used in combination with prism B of refractive index 1.8 to produce dispersion without deviation. Prism angle of prism B is equal to _____ degrees.

Answer (03.75°)

Sol. For dispersion without deviation

$$A_A(\mu_A - 1) + A_B(\mu_B - 1) = 0$$

$$6(1.5 - 1) + A(1.8 - 1) = 0$$

$$A = -\frac{3}{0.8} = -3.75^\circ$$

27.

28.

29.

30.