















Practice, Learn and Achieve
Your Goal with Prepp

SSC MTS Exam

Previous Paper

Simplifying
Government Exams

 SSC CHSL	 IAS EXAM	 RRB NTPC	 NTSE	 CDS
 SSC CGL	 CBSE UGC NET	 IBPS PO	 NDA	
 SBI PO	 IBPS CLERK	 AFCAT	 SSC JE	 CTET
 CSIR UGC NET	 CAPF	 IBPS RRB		

Section : General English

Q.1 Select the most appropriate word for the given group of words:

Rearing of silk worms

- Ans
- 1. Horticulture
 - 2. Sericulture
 - 3. Agriculture
 - 4. Pisciculture

Question ID : 2390873277

Status : Answered

Chosen Option : 2

Q.2 Select the most appropriate option to fill in the blank and make a grammatically correct sentence.

The players returned to the dilapidated hotel that _____ them.

- Ans
- 1. was been allocated to
 - 2. were allocated to
 - 3. had allocated to
 - 4. was allocated to

Question ID : 2390873262

Status : Not Attempted and Marked For Review

Chosen Option : --

Q.3 Select the most appropriate meaning of the given idiom.

To lose one's head

- Ans
- 1. To lose one's position
 - 2. To lose self control
 - 3. To die valiantly in a war
 - 4. To be beheaded for disloyalty

Question ID : 2390873274

Status : Answered

Chosen Option : 3

Q.4 Identify the segment in the sentence which contains the grammatical error.

After playing cricket / till 2 o'clock / the children ate their lunch / and left to home.

- Ans
- 1. the children ate their lunch
 - 2. After playing cricket
 - 3. and left to home
 - 4. till 2 o'clock

Question ID : 2390873257
Status : Answered
Chosen Option : 1

Q.5 Select the most appropriate meaning of the given idiom.

To spill the beans

- Ans
- 1. To waste food items
 - 2. To drop some food
 - 3. To give away a secret
 - 4. To plan a strategy

Question ID : 2390873275
Status : Answered
Chosen Option : 1

Q.6 Select the most appropriate word to fill in the blank and make a meaningful sentence.

Suman found a hundred-rupee note _____ on the road.

- Ans
- 1. lying
 - 2. lied
 - 3. laid
 - 4. laying

Question ID : 2390873280
Status : Answered
Chosen Option : 1

Q.7 Select the most appropriate word for the given group of words:

An account of a person's life written by self

- Ans
- 1. Cartography
 - 2. Calligraphy
 - 3. Autobiography
 - 4. Biography

Question ID : 2390873276
Status : Answered
Chosen Option : 3

Comprehension:

In the following passage some words have been deleted. Fill in the blanks with the help of the alternatives given. Select the most appropriate option for each blank.

A city is the (1)_____ man's battleground where he fights for (2)_____. There is a constant competition for jobs, houses and support services (3)_____ health and education. This cut-throat competition results in lack of sensitivity (4)_____ fellow-citizens and a feeling of hatred for (5)_____ who are more successful.

SubQuestion No : 8

Q.8 Select the most appropriate option to fill in blank No.1.

- Ans
- 1. historic
 - 2. primitive
 - 3. modern
 - 4. early

Question ID : 2390873265
Status : Answered
Chosen Option : 3

Comprehension:

In the following passage some words have been deleted. Fill in the blanks with the help of the alternatives given. Select the most appropriate option for each blank.

A city is the (1)_____ man's battleground where he fights for (2)_____. There is a constant competition for jobs, houses and support services (3)_____ health and education. This cut-throat competition results in lack of sensitivity (4)_____ fellow-citizens and a feeling of hatred for (5)_____ who are more successful.

SubQuestion No : 9

Q.9 Select the most appropriate option to fill in blank No.2.

- Ans
- 1. live
 - 2. win
 - 3. death
 - 4. survival

Question ID : 2390873266
Status : Answered
Chosen Option : 4

Comprehension:

In the following passage some words have been deleted. Fill in the blanks with the help of the alternatives given. Select the most appropriate option for each blank.

A city is the (1)_____ man's battleground where he fights for (2)_____. There is a constant competition for jobs, houses and support services (3)_____ health and education. This cut-throat competition results in lack of sensitivity (4)_____ fellow-citizens and a feeling of hatred for (5)_____ who are more successful.

SubQuestion No : 10

Q.10 Select the most appropriate option to fill in blank No.3.

- Ans
- 1. dislike
 - 2. likely
 - 3. like
 - 4. unlike

Question ID : 2390873267
Status : Answered
Chosen Option : 3

Comprehension:

In the following passage some words have been deleted. Fill in the blanks with the help of the alternatives given. Select the most appropriate option for each blank.

A city is the (1)_____ man's battleground where he fights for (2)_____. There is a constant competition for jobs, houses and support services (3)_____ health and education.

This cut-throat competition results in lack of sensitivity (4)_____ fellow-citizens and a feeling of hatred for (5)_____ who are more successful.

SubQuestion No : 11

Q.11 Select the most appropriate option to fill in blank No.4.

- Ans 1. towards
 2. along
 3. over
 4. at

Question ID : 2390873268
Status : Answered
Chosen Option : 3

Comprehension:

In the following passage some words have been deleted. Fill in the blanks with the help of the alternatives given. Select the most appropriate option for each blank.

A city is the (1)_____ man's battleground where he fights for (2)_____. There is a constant competition for jobs, houses and support services (3)_____ health and education. This cut-throat competition results in lack of sensitivity (4)_____ fellow-citizens and a feeling of hatred for (5)_____ who are more successful.

SubQuestion No : 12

Q.12 Select the most appropriate option to fill in blank No.5.

- Ans 1. them
 2. those
 3. their
 4. these

Question ID : 2390873269
Status : Answered
Chosen Option : 3

Q.13 Select the most appropriate option to fill in the blank and make a grammatically correct sentence.

Maryam _____ to anyone as she was angry.

- Ans 1. did not speak
 2. not spoke
 3. did not spoke
 4. did not spoken

Question ID : 2390873263
Status : Answered
Chosen Option : 3

Q.14 Select the most appropriate synonym of the given word.

POPULAR

- Ans 1. Favourite
 2. untidy
 3. Specific
 4. Particular

Question ID : 2390873270
Status : Answered
Chosen Option : 2

Q.15 Select the most appropriate synonym of the given word.

DESTROY

- Ans
- 1. Assist
 - 2. Restore
 - 3. Preserve
 - 4. Ruin

Question ID : 2390873271
Status : Answered
Chosen Option : 4

Q.16 Select the most appropriate word to fill in the blank and make a meaningful sentence.

The doctor advised him to consume _____ water without any additive.

- Ans
- 1. precious
 - 2. potent
 - 3. plain
 - 4. pleasant

Question ID : 2390873281
Status : Answered
Chosen Option : 4

Q.17 Select the most appropriate antonym of the given word.

INFALLIBLE

- Ans
- 1. Imperfect
 - 2. Notorious
 - 3. Dependable
 - 4. Flawless

Question ID : 2390873272
Status : Answered
Chosen Option : 3

Q.18 Select the correctly spelt word.

- Ans
- 1. Reveanu
 - 2. Revenue
 - 3. Ravanue
 - 4. Ravenue

Question ID : 2390873279
Status : Answered
Chosen Option : 2

Q.19 Select the most appropriate option to substitute the underlined segment. If there is no need to substitute it, select No improvement.

Bulbul is honest girl but she is also very rude.

- Ans
- 1. Bulbul is an honest girl
 - 2. Bulbul is very honest girl
 - 3. Bulbul is a honest girl
 - 4. No improvement

Question ID : 2390873259
Status : Answered
Chosen Option : 4

Q.20 Identify the segment in the sentence which contains the grammatical error.

Had Rajani not taken / a cab to the station / she would have definitely / miss the train.

- Ans
- 1. she would have definitely
 - 2. a cab to the station
 - 3. miss the train
 - 4. Had Rajani not taken

Question ID : 2390873256
Status : Answered
Chosen Option : 1

Q.21 Select the wrongly spelt word.

- Ans
- 1. Brittle
 - 2. Parellel
 - 3. Vessel
 - 4. Kettle

Question ID : 2390873278
Status : Answered
Chosen Option : 2

Q.22 Select the most appropriate option to substitute the underlined segment. If there is no need to substitute it, select No improvement.

I would be eternally indebted from you if you could help me.

- Ans
- 1. indebted in you
 - 2. indebted for you
 - 3. No improvement
 - 4. indebted to you

Question ID : 2390873261
Status : Answered
Chosen Option : 2

Q.23 Identify the segment in the sentence which contains the grammatical error.

I have no doubt / that Girish is / one of the most intelligent student / in the entire district.

- Ans
- that Girish is
 - in the entire district

3. I have no doubt

4. one of the most intelligent student

Question ID : 2390873258

Status : Answered

Chosen Option : 2

Q.24 Select the most appropriate antonym of the given word.

REWARD

Ans 1. Praise

2. Produce

3. Present

4. Punish

Question ID : 2390873273

Status : Answered

Chosen Option : 1

Q.25 Select the most appropriate option to substitute the underlined segment. If there is no need to substitute it, select No improvement.

She is extremely fond about chocolates and cookies.

Ans 1. She is extreme fond of

2. She is extremely fond for

3. No improvement

4. She is extremely fond of

Question ID : 2390873260

Status : Answered

Chosen Option : 3

Section : General Intelligence & Reasoning

Q.1 In a certain code language, '6532' is written as '3467'. What will be the code for '7915' in that code language?

Ans 1. 1463

2. 3939

3. 2084

4. 2658

Question ID : 2390873515

Status : Answered

Chosen Option : 3

Q.2 Which two numbers need to be interchanged to make the given equation correct?

$$96 \times 6 - 8 \div 2 + 3 = 768$$

Ans 1. 2, 3

2. 6, 3

3. 96, 8

4. 6, 8

Question ID : 2390873526

Status : Answered

Chosen Option : 4

Q.3 There are five cousins namely Ashish, Manish, Kailash, Daksh, and Lalit of different ages. All these cousins are arranged in the descending order of their ages. Ashish, brother of Kailash, is the second youngest and is 19 years old. Daksh, brother of Lalit, is between Kailash and Manish. Kailash is 42 years old and Ashish is 20 years younger than Daksh. Who among the following is the youngest?

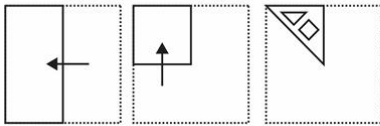
- Ans
- 1. Daksh
 - 2. Ashish
 - 3. Manish
 - 4. Lalit

Question ID : 2390873519

Status : Not Attempted and Marked For Review

Chosen Option : --

Q.4 A piece of paper is folded and cut as shown below in the question figures, how it will appear when unfolded.



Ans

- 1.
- 2.
- 3.
- 4.

Question ID : 2390873532
Status : Answered
Chosen Option : 3

Q.5 In a certain code language, 'SLAM' is written as 'OHWI'. What will be the code for 'NEST' in that code language?

- Ans
- 1. IBMQ
 - 2. RHID
 - 3. IAOP
 - 4. JAOP

Question ID : 2390873513
Status : Answered
Chosen Option : 4

Q.6 Select the number that will replace the question mark.

4 16 63
7 35 ?
8 48 287

- Ans
- 1. 140
 - 2. 174
 - 3. 210
 - 4. 198

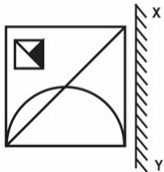
Question ID : 2390873525
Status : Answered
Chosen Option : 2

Q.7 If DECEMBER is coded as 5354185213 and CONFIDENCE is coded as 9614153531454, then how will STAMPEDE be coded as?

- Ans
- 1. 131201954516
 - 2. 131201954510
 - 3. 131201594510
 - 4. 132101954516

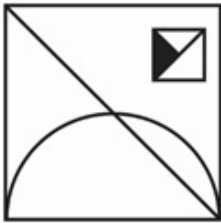
Question ID : 2390873516
Status : Answered
Chosen Option : 1

Q.8 If a mirror is placed on the line XY, then which of the answer figures will be the right mirror image of the given figure?



Ans

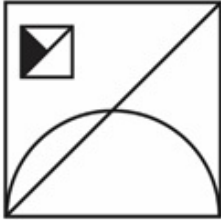
✓ 1.



✗ 2.



✗ 3.



✗ 4.



Question ID : 2390873531
Status : Answered
Chosen Option : 1

Q.9 Read the given statements and conclusions carefully. Assuming that the information given in the statements is true, even if it appears to be at variance with commonly known facts, decide which of the given conclusions logically follow(s) from the statements.

Statements:

All bears are tigers.
Some bears are lions.

Conclusion

I : Some tigers are lions.
II : No lions are tigers.

- Ans
- ✗ 1. Neither conclusion I nor II follows
 - ✗ 2. Both conclusions I and II follow
 - ✓ 3. Only conclusion I follows
 - ✗ 4. Only conclusion II follows

Question ID : 2390873520
Status : Answered
Chosen Option : 3

Q.10 Which two signs need to be interchanged to make the given equation correct?

$$104 \div 8 + 6 - 9 \times 3 = 34$$

Ans ✓ 1. +, -

2. +, x

3. -, x

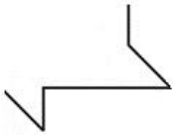
4. ÷, +

Question ID : 2390873527

Status : Answered

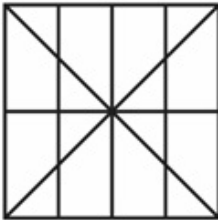
Chosen Option : 1

Q.11 Select the option in which the given figure is embedded. (Rotation is not allowed)

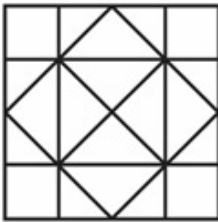


Ans

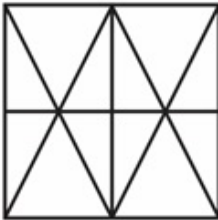
1.



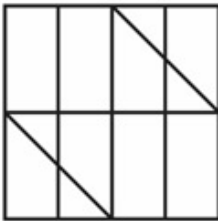
2.



3.



4.



Question ID : 2390873530

Status : Answered

Chosen Option : 4

Q.12 Select the option that is related to the third term in the same way as the second term is related to the first term.

64 : 512 :: 144 : ?

Ans 1. 1548

2. 1618

3. 1788

✓ 4. 1728

Question ID : 2390873524
Status : Answered
Chosen Option : 4

Q.13 Select the correct option that will complete the series.

13, 42, 129, 390, ____

- Ans
- ✗ 1. 1220
 - ✗ 2. 1170
 - ✗ 3. 1179
 - ✓ 4. 1173

Question ID : 2390873523
Status : Answered
Chosen Option : 4

Q.14 In a certain code language, 'CLAY' is written as 'FODB'. What will be the code for 'FROG' in that code language?

- Ans
- ✓ 1. IURJ
 - ✗ 2. IMSK
 - ✗ 3. KMRI
 - ✗ 4. JMOI

Question ID : 2390873514
Status : Answered
Chosen Option : 1

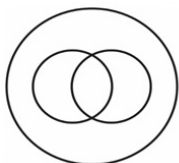
Q.15 Select the option that is related to the third term in the same way as the second term is related to the first term.

MRW : JOT :: QGP : ?

- Ans
- ✗ 1. NPO
 - ✗ 2. OGN
 - ✗ 3. NGM
 - ✓ 4. NDM

Question ID : 2390873512
Status : Answered
Chosen Option : 4

Q.16 The Venn diagram given in the question represents the relationship between the items given in which of the following options?



- Ans
- ✗ 1. flowers, leaves and bees
 - ✓ 2. teachers, women and humans

3. mangoes, potatoes and vegetables

4. cats, dogs and pets

Question ID : 2390873533

Status : Answered

Chosen Option : 2

Q.17 Select the option that is related to the third word in the same way as the second word is related to the first word.

Man : Boy :: Dog : ?

Ans 1. Kennel

2. Puppy

3. Bitch

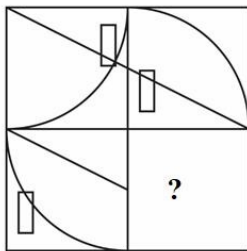
4. Cub

Question ID : 2390873511

Status : Answered

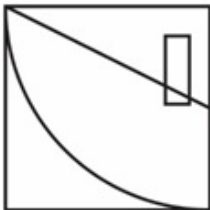
Chosen Option : 2

Q.18 Study the given pattern carefully and select the figure that will complete the pattern given in the question figure.

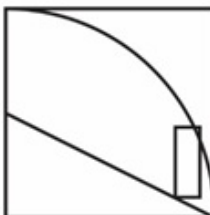


Ans

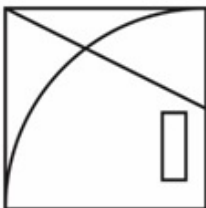
1.



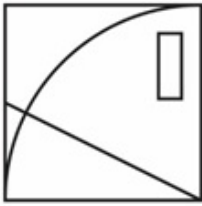
2.



3.



✓ 4.



Question ID : 2390873529
Status : Answered
Chosen Option : 4


Q.19 Select the correct option that will complete the series.

441, 484, 529, 576, _____

- Ans
- ✗ 1. 630
 - ✗ 2. 610
 - ✓ 3. 625
 - ✗ 4. 641

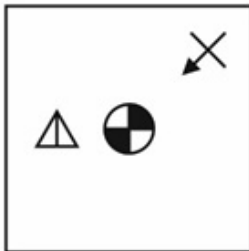
Question ID : 2390873522
Status : Answered
Chosen Option : 3

Q.20 Select the option figure that will come next in the following series.

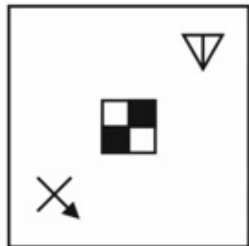


Ans

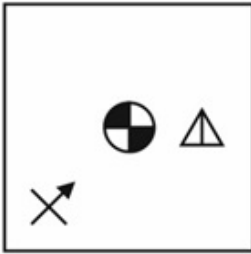
✗ 1.



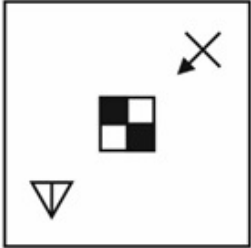
✓ 2.



3.



4.



Question ID : 2390873528

Status : Answered

Chosen Option : 2

Q.21 There are five different cottages, M to Q in a row. M is to the right of N and Q is to the left of O and right of M. N is to the right of P. The first cottage from the left is _____.

- Ans
- 1. P
 - 2. Q
 - 3. N
 - 4. M

Question ID : 2390873517

Status : Not Attempted and Marked For Review

Chosen Option : --

Q.22 Read the given statements and conclusions carefully. Assuming that the information given in the statements is true, even if it appears to be at variance with commonly known facts, decide which of the given conclusions logically follow(s) from the statements.

Statements:

All pans are jugs.
No plates are jugs.

Conclusion

I : Some pans are plates.
II : Some jugs are pans.
III : No pans are plates.

- Ans
- 1. Only conclusion I follows
 - 2. All conclusions I, II and III follow
 - 3. Only conclusion I and III follows
 - 4. Only conclusion II and III follows

Question ID : 2390873521

Status : Answered

Chosen Option : 4

Q.23 Select the option that is related to the third word in the same way as the second word is related to the first word.

Teacher : Student :: Doctor : ?

- Ans
- 1. Coat
 - 2. Hospital
 - 3. Patient
 - 4. Stethoscope

Question ID : 2390873510
Status : Answered
Chosen Option : 3

Q.24 Select the term that will come next in the following series.

CAY, FDB, IGE, _____

- Ans
- 1. LJH
 - 2. KIG
 - 3. KJL
 - 4. JHL

Question ID : 2390873509
Status : Answered
Chosen Option : 1

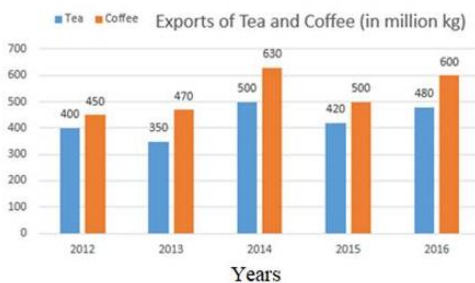
Q.25 Harmeet, Ishpreet, Jaspreet, Karpreet and Rashmeet are sitting on a bench facing North. Jaspreet is between Ishpreet and Rashmeet. Harmeet is to the right of Ishpreet. Karpreet is not next to Rashmeet. Who is to the right of Harmeet?

- Ans
- 1. Rashmeet
 - 2. Jashpreet
 - 3. Ishpreet
 - 4. Karpreet

Question ID : 2390873518
Status : Not Attempted and Marked For Review
Chosen Option : --

Section : Numerical Aptitude

Q.1 The given Bar Graph presents the Export of Tea and Coffee (in million kg) for the years 2012 to 2016.



What is the ratio of total export of tea in 2012, 2014 and 2015 to the total export of coffee in 2013 and 2014?

- Ans
- 1. 6 : 5
 - 2. 10 : 9
 - 3. 9 : 10

Latest Sarkari Jobs, Govt Exam Results,
Vacancies and updates on one click

Know More

✗ 4. 5 : 6

Question ID : 2390873656
Status : Answered
Chosen Option : 1

Q.2 A sum of ₹5200 is divided amongst A, B, C and D such that the ratio of shares of A and B is 2 : 3, that of B and C is 4 : 5 and that of C and D is 1 : 2. What is the difference between the shares of B and D?

- Ans
- ✓ 1. ₹1440
 - ✗ 2. ₹1280
 - ✗ 3. ₹1200
 - ✗ 4. ₹1360

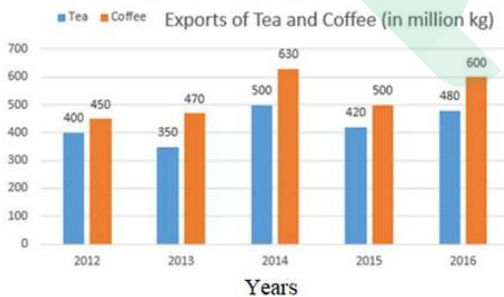
Question ID : 2390873645
Status : Answered
Chosen Option : 1

Q.3 A person travels a certain distance at a speed of 18 km/h and returns to the starting point at 12 km/h. If he takes 2 hours 55 minutes for the whole journey, the distance one way is:

- Ans
- ✗ 1. 18 km
 - ✓ 2. 21 km
 - ✗ 3. 24 km
 - ✗ 4. 25 km

Question ID : 2390873652
Status : Answered
Chosen Option : 2

Q.4 The given Bar Graph presents the Export of Tea and Coffee (in million kg) for the years 2012 to 2016.



Total export of coffee is approximately what percent more than the total export of tea during the five years?

- Ans
- ✓ 1. 23
 - ✗ 2. 28
 - ✗ 3. 26
 - ✗ 4. 25

Question ID : 2390873657
Status : Not Answered
Chosen Option : --

Q.5 The value of $(8 \div \frac{2}{3} \text{ of } 4) \div (8 \times \frac{2}{3} \div 4)$ of $(8 \div \frac{2}{3} \times 4)$ is:

- Ans
- ✓ 1. $\frac{15}{64}$
 - ✗ 2. $7\frac{13}{16}$
 - ✗ 3. $21\frac{3}{5}$
 - ✗ 4. 1

Question ID : 2390873636
Status : Not Answered
Chosen Option : --

Q.6 In an examination, the average score of students in a class who passed is 69 and that of who failed is 61. If the average score of all the students, who appeared in the examination is 66, then the percentage of students who passed is:

- Ans
- ✗ 1. 37.5
 - ✗ 2. 60
 - ✗ 3. 56
 - ✓ 4. 62.5

Question ID : 2390873638
Status : Not Answered
Chosen Option : --

Q.7 In a 60 litre solution of acid and water, the ratio of acid and water is 3 : 7. How much (in litre) acid is to be mixed in the solution so that the ratio of acid and water in the resulting solution is 1 : 2?

- Ans
- ✓ 1. 3
 - ✗ 2. 6
 - ✗ 3. 5
 - ✗ 4. $6\frac{1}{2}$

Question ID : 2390873644
Status : Answered
Chosen Option : 2

Q.8 Let x be the median of data: 33, 42, 28, 49, 32, 37, 52, 57, 35, 41.

If 32 is replaced by 36 and 41 by 63, then the median of the data, so obtained, is y. What is the value of (x + y)?

- Ans
- ✗ 1. 79.5
 - ✗ 2. 79
 - ✗ 3. 78
 - ✓ 4. 78.5

Question ID : 2390873640
Status : Answered
Chosen Option : 4

Q.9 The value of $165 - [135 - \{84 \div 4 \text{ of } 3 - (16 - 18 \div 3)\}]$ is:

- Ans
- ✓ 1. 27
 - ✗ 2. 83

3. 81

4. $36\frac{1}{3}$

Question ID : 2390873635
Status : Answered
Chosen Option : 2

Q.10 A pipe can fill a tank in 18 hours. In how much time (in hours) will another pipe operating at one-third the efficiency of the first pipe fill a tank whose capacity is 50% of that of the first tank?

Ans 1. 45

2. 21

3. 27

4. 36

Question ID : 2390873650
Status : Not Answered
Chosen Option : --

Q.11 A trader sells two articles for ₹9520 each, one at a profit of 12% and the other at a loss of 15%. His overall percentage loss (correct to one decimal place) is:

Ans 1. 3.8

2. 3.1

3. 4.4

4. 3.4

Question ID : 2390873642
Status : Not Answered
Chosen Option : --

Q.12 A shopkeeper allows 10% discount on the marked price of an article and still makes a profit of 8%. If the marked price is ₹480, then what is the cost price (in ₹) of the article?

Ans 1. 350

2. 400

3. 360

4. 420

Question ID : 2390873639
Status : Answered
Chosen Option : 2

Q.13 A train X travelling at 72 km/h crosses another train Y travelling at 63 km/h (in opposite direction) in 18 seconds. If the length of train Y is two-third the length of X, then length of train X is:

Ans 1. 420 m

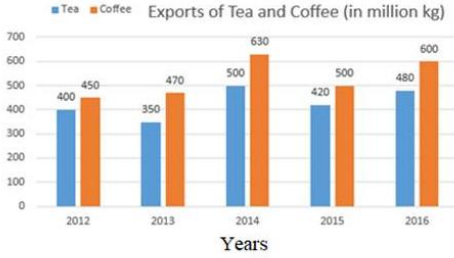
2. 300 m

3. 405 m

4. 270 m

Question ID : 2390873651
Status : Answered

Q.14 The given Bar Graph presents the Export of Tea and Coffee (in million kg) for the years 2012 to 2016.



The number of years, in each of which the export of coffee is more than 20% as compared to the export of tea in that year is:

- Ans**
- 1. 1
 - 2. 3
 - 3. 4
 - 4. 2

Question ID : 2390873658

Status : Answered

Chosen Option : 4

Q.15 Let x be the smallest number greater than 600 which gives the remainders 2, 3 and 4, when divided by 5, 6 and 7, respectively. The sum of digits of x is:

- Ans**
- 1. 14
 - 2. 13
 - 3. 15
 - 4. 16

Question ID : 2390873634

Status : Not Answered

Chosen Option : --

Q.16 A certain sum amounts to ₹12096 at 8% p.a. in $5\frac{1}{2}$ years at simple interest. What will be the simple interest on the same sum at 10% p.a. in 8 years?

- Ans**
- 1. ₹6810
 - 2. ₹6720
 - 3. ₹6760
 - 4. ₹6680

Question ID : 2390873647

Status : Answered

Chosen Option : 3

Q.17 An item is sold for ₹702 at a profit of ₹162. If an additional profit of 10% is to be made, then the new selling price will be:

- Ans**
- 1. ₹810
 - 2. ₹756
 - 3. ₹729

✗ 4. ₹750

Question ID : 2390873643
Status : Answered
Chosen Option : 2

Q.18 A sphere is inscribed in a cube. What is the ratio of the volume of the cube to the volume of the sphere?

- Ans
- ✗ 1. $8 : \pi$
 - ✗ 2. $9 : 2\pi$
 - ✓ 3. $6 : \pi$
 - ✗ 4. $11 : 2\pi$

Question ID : 2390873655
Status : Answered
Chosen Option : 2

Q.19 What will be the compound interest on a sum of ₹31250, at 12% compound interest (interest compounded yearly) in $2\frac{2}{3}$ years?

- Ans
- ✗ 1. ₹11096
 - ✓ 2. ₹11086
 - ✗ 3. ₹11068
 - ✗ 4. ₹11048

Question ID : 2390873648
Status : Not Answered
Chosen Option : --

Q.20 In spite of an increase in price of a commodity by 20%, the overall expenditure on it increases by 12%. What is the percentage decrease in the quantity of commodity consumed?

- Ans
- ✓ 1. $6\frac{2}{3}$
 - ✗ 2. $7\frac{1}{2}$
 - ✗ 3. 8
 - ✗ 4. $7\frac{1}{3}$

Question ID : 2390873641
Status : Not Answered
Chosen Option : --

Q.21 What is the area (in m^2) of a triangular field whose sides measure 25 m, 39 m and 56 m?

- Ans
- ✓ 1. 420
 - ✗ 2. 240
 - ✗ 3. 210
 - ✗ 4. 480

Question ID : 2390873653
Status : Answered

Chosen Option : 1

Q.22 The average of 20 numbers is 80. The average of first 10 numbers is 76.5 and that of next 7 numbers is 82. The 18th number is 3 more than the 19th number but 3 less than the 20th number. What is the average of 18th and 19th numbers?

- Ans
- 1. 88.5
 - 2. 85.5
 - 3. 86
 - 4. 85

Question ID : 2390873637
Status : Not Answered
Chosen Option : --

Q.23 The radius of a solid right circular cylinder is $66\frac{2}{3}$ % of its height. If height is h centimetres then its total surface area (in cm²) is:

- Ans
- 1. $\frac{44}{9} \pi h^2$
 - 2. $\frac{20}{9} \pi h^2$
 - 3. $\frac{40}{9} \pi h^2$
 - 4. $4\pi h^2$

Question ID : 2390873654
Status : Answered
Chosen Option : 2

Q.24 A can do a piece of work in 15 days and B can do it in $22\frac{1}{2}$ days. They worked together for 6 days and the remaining work was completed by C alone in 6 days. A, B and C together will do the same work in:

- Ans
- 1. 8 days
 - 2. 12 days
 - 3. 10 days
 - 4. 6 days

Question ID : 2390873649
Status : Answered
Chosen Option : 4

Q.25 If $a : b = 2 : 3$, $a : d = 3 : 4$, and $e : d = 3 : 5$, then $e : b = ?$

- Ans
- 1. 15 : 8
 - 2. 10 : 9
 - 3. 8 : 15
 - 4. 9 : 10

Question ID : 2390873646
Status : Not Answered
Chosen Option : --

Q.1 Which of these is the famous art form Karnataka that combines dance, music, dialogue, costume, make-up and stage techniques to create a unique experience?

- Ans
- 1. Kalaripayettu
 - 2. Kathakali
 - 3. Yakshagana
 - 4. Ottam Thullal

Question ID : 2390873385
Status : Answered
Chosen Option : 3

Q.2 Which of the following organism has a 2-Chambered heart?

- Ans
- 1. Human beings
 - 2. Monkey
 - 3. Sparrows
 - 4. Fishes

Question ID : 2390873401
Status : Answered
Chosen Option : 4

Q.3 Mirror used by dentist to see large images of teeth of patients is _____.

- Ans
- 1. ZigZag Mirror
 - 2. Convex Mirror
 - 3. Plane Mirror
 - 4. Concave Mirror

Question ID : 2390873399
Status : Answered
Chosen Option : 4

Q.4 What percent of energy is transmitted from one trophic level to another in a food chain?

- Ans
- 1. 0.1
 - 2. 0.2
 - 3. 0.15
 - 4. 0.05

Question ID : 2390873398
Status : Not Attempted and Marked For Review
Chosen Option : --

Q.5 Who was awarded Sir Garfield Solers Trophy for ICC Cricketer of the year 2018?

- Ans
- 1. Virat Kohli
 - 2. Joe Root
 - 3. Kane Williamson
 - 4. Steven Smith

Question ID : 2390873389

Status : **Not Attempted and
Marked For Review**

Chosen Option : --

Q.6 Who was felicitated with Japan's coveted 'Nikkei Asia Prize' for culture and community in 2018?

- Ans
- 1. Chetan Bhagat
 - 2. Lal Krishna Advani
 - 3. Bhupinder Hooda
 - 4. Bindeshwar Pathak

Question ID : 2390873390

Status : **Not Attempted and
Marked For Review**

Chosen Option : --

Q.7 Who introduced Ryotwari System in India?

- Ans
- 1. Lord Cornwallis and Alexander Reed
 - 2. Holt Mackenzie
 - 3. Alexander Reed and Thomas Munro
 - 4. Lord Irwin

Question ID : 2390873406

Status : **Not Attempted and
Marked For Review**

Chosen Option : --

Q.8 Which of the following Traditional sports-State pair is INCORRECT?

- Ans
- 1. Mukna - Manipur
 - 2. Gatka - Punjab
 - 3. Silambam - Madhya Pradesh
 - 4. Thang-ta - Manipur

Question ID : 2390873388

Status : **Not Attempted and
Marked For Review**

Chosen Option : --

Q.9 Son River which is one of the largest southern tributaries of Ganga originates in which state?

- Ans
- 1. West Bengal
 - 2. Uttar Pradesh
 - 3. Assam
 - 4. Madhya Pradesh

Question ID : 2390873405

Status : **Not Attempted and
Marked For Review**

Chosen Option : --

Q.10 When did Alexander the Great die?

- Ans
- 1. 300 BCE
 - 2. 323 BCE
 - 3. 423 BCE
 - 4. 623 BCE

Question ID : 2390873407

Status : **Not Attempted and Marked For Review**

Chosen Option : --

Q.11 Which of the following sport has NOT been played at the Olympics since 1900?

- Ans
- 1. Cricket
 - 2. Hockey
 - 3. Badminton
 - 4. Archery

Question ID : 2390873387

Status : **Answered**

Chosen Option : 1

Q.12 State-owned Power Finance Corporation (PFC) completed the acquisition of majority stake in REC Ltd by transferring _____ crore to the government.

- Ans
- 1. ₹12,000
 - 2. ₹10,000
 - 3. ₹14,500
 - 4. ₹16,500

Question ID : 2390873392

Status : **Not Attempted and Marked For Review**

Chosen Option : --

Q.13 Who has the final authority for making laws in India?

- Ans
- 1. Prime Minister
 - 2. Governor
 - 3. Parliament
 - 4. President

Question ID : 2390873397

Status : **Answered**

Chosen Option : 3

Q.14 What is the chemical name of Dry Ice?

- Ans
- 1. Carbon Oxide
 - 2. Nitrogen Oxide
 - 3. Oxidane
 - 4. Sulpher Dioxide

Question ID : 2390873402
Status : Answered
Chosen Option : 1

Q.15 Himalayas run through how many states in India?

- Ans
- 1. 5
 - 2. 8
 - 3. 7
 - 4. 10

Question ID : 2390873403
Status : Not Attempted and Marked For Review
Chosen Option : --

Q.16 Meenakshi Temple is located in which State?

- Ans
- 1. Karnataka
 - 2. Tamil Nadu
 - 3. Kerala
 - 4. Andhra Pradesh

Question ID : 2390873384
Status : Not Attempted and Marked For Review
Chosen Option : --

Q.17 Who is the Chairman of Monetary Policy Committee?

- Ans
- 1. Governor of the Reserve Bank of India
 - 2. President of India
 - 3. Prime Minister of India
 - 4. Finance Minister of India

Question ID : 2390873394
Status : Answered
Chosen Option : 1

Q.18 Dhauladhar Range forms part of which Himatayas?

- Ans
- 1. Lesser Himalayas
 - 2. Shiwaliks
 - 3. Purvanchals
 - 4. Greater Himalayas

Question ID : 2390873404
Status : Not Attempted and Marked For Review
Chosen Option : --

Q.19 In which order were the states annexed by Britishers under Doctrine of Lapse?

- Ans
- 1. Udaipur - Jhansi-Nagpur
 - 2. Satara - Udaipur

3. Nagpur - Satara - Jhansi

4. Jhansi - Satara - Nagpur

Question ID : 2390873408

Status : **Not Attempted and Marked For Review**

Chosen Option : --

Q.20 Dendrites and Axon are parts of which cell?

Ans 1. Red blood cell

2. Neuron

3. Nephron

4. White blood cell

Question ID : 2390873400

Status : **Answered**

Chosen Option : 2

Q.21 Second Backward Classes Commission is also known as _____.

Ans 1. Nehru Commission

2. Mandal Commission

3. Tendulkar Commission

4. Ambedkar Commission

Question ID : 2390873396

Status : **Answered**

Chosen Option : 4

Q.22 In which city of India is the multi-art complex called Bharat Bhavan located? It was inaugurated by the then Prime Minister Mrs. Indira Gandhi in 1982.

Ans 1. Lucknow

2. Bhopal

3. Pune

4. Bangalore

Question ID : 2390873386

Status : **Not Attempted and Marked For Review**

Chosen Option : --

Q.23 _____ has been appointed as the Secretary General of United Nations on 1 January 2017.

Ans 1. Ban Ki-moon

2. Antonio Guterres

3. Michelle Bachelet

4. Satya S. Tripathi

Question ID : 2390873391

Status : **Not Attempted and Marked For Review**

Chosen Option : --

Q.24 The Mahalanobis Plan of development was adopted during which Five Year Plan?

- Ans
- 1. First
 - 2. Fourth
 - 3. Second
 - 4. Third

Question ID : 2390873393

Status : **Not Attempted and
Marked For Review**

Chosen Option : --

Q.25 Who is the head of the State and is the highest formal authority in India?

- Ans
- 1. Prime Minister
 - 2. Vice-President
 - 3. President
 - 4. Parliament

Question ID : 2390873395

Status : **Not Attempted and
Marked For Review**

Chosen Option : --



Latest Sarkari jobs, Govt Exam alerts, Results and Vacancies

- ▶ Latest News and Notification
- ▶ Exam Paper Analysis
- ▶ Topic-wise weightage
- ▶ Previous Year Papers with Answer Key
- ▶ Preparation Strategy & Subject-wise Books

To know more [Click Here](#)



www.prepp.in