

**QUESTION BOOKLET – 2018**  
**Subjects : Paper II : Physics & Chemistry**

Question Booklet Version
<b>44</b>
(Write this number on your Answer Sheet)

Roll No.
Answer Sheet No.

(Write this number on your Answer Sheet)
<b>4074936</b>
Question Booklet Sr. No.

Duration: 1 Hour 30 Minutes

Total Marks : 100

This is to certify that, the entries of Roll Number and Answer Sheet Number have been correctly written and verified.

*Candidate's Signature*

*Invigilator's Signature*

**Instructions to Candidates**

1. This question booklet contains 100 Objective Type Questions (Single Best Response Type) in the subjects of Physics (50) and Chemistry (50).
2. The question paper and OMR (Optical Mark Reader) Answer Sheets are issued to examinees separately at the beginning of the examination session.
3. Choice and sequence for attempting questions will be as per the convenience of the candidate.
4. Candidate should carefully read the instructions printed on the Question Booklet and Answer Sheet and make the correct entries on the Answer Sheet. As Answer Sheets are designed to suit the OPTICAL MARK READER (OMR) SYSTEM, special care should be taken to mark appropriate entries/answers correctly. Special care should be taken to fill QUESTION BOOKLET VERSION, SERIAL No. and Roll No. accurately. The correctness of entries has to be cross-checked by the invigilators. **The candidate must sign on the Answer Sheet and Question Booklet.**
5. Read each question carefully.
6. Determine the correct answer from out of the four available options given for each question.
7. Fill the appropriate circle completely like this ●, for answering the particular question, with Black ink ball point pen only, in the OMR Answer Sheet.
8. Each answer with correct response shall be awarded **one (1) mark**. There is **no Negative Marking**. If the examinee has marked two or more answers or has done scratching and overwriting in the Answer Sheet in response to any question, or has marked the circles inappropriately e.g. half circle, dot, tick mark, cross etc, mark/s shall NOT be awarded for such answer/s, as these may not be read by the scanner. Answer sheet of each candidate will be evaluated by computerized scanning method only (Optical Mark Reader) and there will not be any manual checking during evaluation or verification.
9. Use of whitener or any other material to erase/hide the circle once filled is not permitted. Avoid overwriting and/or striking of answers once marked.
10. Rough work should be done only on the blank space provided in the Question Booklet. **Rough work should not be done on the Answer Sheet.**
11. The required mathematical tables (Log etc.) are provided within the Question Booklet.
12. Immediately after the prescribed examination time is over, the Answer sheet is to be returned to the Invigilator. Confirm that both the Candidate and Invigilator have signed on question booklet and answer sheet.
13. No candidate is allowed to leave the examination hall till the examination session is over.

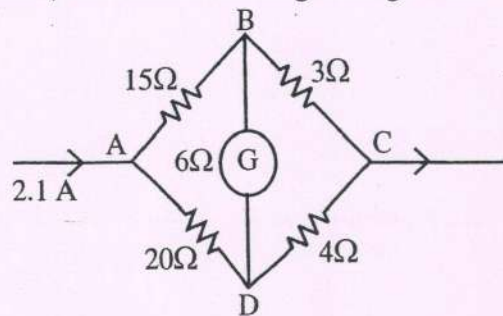
**SEAL**





**PHYSICS**

- The path length of oscillation of simple pendulum of length 1 metre is 16 cm. Its maximum velocity is ( $g = \pi^2 \text{ m/s}^2$ )  
 A)  $2\pi \text{ cm/s}$       B)  $4\pi \text{ cm/s}$       C)  $8\pi \text{ cm/s}$       D)  $16\pi \text{ cm/s}$
- A vessel completely filled with water has holes 'A' and 'B' at depths 'h' and '3h' from the top respectively. Hole 'A' is a square of side 'L' and 'B' is circle of radius 'r'. The water flowing out per second from both the holes is same. Then 'L' is equal to  
 A)  $r^{\frac{1}{2}} (\pi)^{\frac{1}{2}} (3)^{\frac{1}{2}}$       B)  $r \cdot (\pi)^{\frac{1}{4}} (3)^{\frac{1}{4}}$       C)  $r \cdot (\pi)^{\frac{1}{2}} (3)^{\frac{1}{4}}$       D)  $r^{\frac{1}{2}} (\pi)^{\frac{1}{3}} (3)^{\frac{1}{2}}$
- A transistor is used as a common emitter amplifier with a load resistance  $2 \text{ K}\Omega$ . The input resistance is  $150 \Omega$ . Base current is changed by  $20 \mu\text{A}$  which results in a change in collector current by  $1.5 \text{ mA}$ . The voltage gain of the amplifier is  
 A) 900      B) 1000      C) 1100      D) 1200
- A disc has mass 'M' and radius 'R'. How much tangential force should be applied to the rim of the disc so as to rotate with angular velocity ' $\omega$ ' in time 't' ?  
 A)  $\frac{MR\omega}{4t}$       B)  $\frac{MR\omega}{2t}$       C)  $\frac{MR\omega}{t}$       D)  $MR \omega t$
- A circular coil carrying current 'I' has radius 'R' and magnetic field at the centre is 'B'. At what distance from the centre along the axis of the same coil, the magnetic field will be  $\frac{B}{8}$  ?  
 A)  $R\sqrt{2}$       B)  $R\sqrt{3}$       C)  $2R$       D)  $3R$
- Two light waves of intensities ' $I_1$ ' and ' $I_2$ ' having same frequency pass through same medium at a time in same direction and interfere. The sum of the minimum and maximum intensities is  
 A)  $(I_1 + I_2)$       B)  $2(I_1 + I_2)$       C)  $(\sqrt{I_1} + \sqrt{I_2})$       D)  $(\sqrt{I_1} - \sqrt{I_2})$
- An alternating voltage  $e = 200\sqrt{2} \sin(100t)$  volt is connected to  $1 \mu\text{F}$  capacitor through a.c. ammeter. The reading of ammeter is  
 A) 5 mA      B) 10 mA      C) 15 mA      D) 20 mA
- In the following network, the current flowing through  $15\Omega$  resistance is



- A) 0.8 A      B) 1.0 A      C) 1.2 A      D) 1.4 A

SPACE FOR ROUGH WORK









19. A conducting wire has length ' $L_1$ ' and diameter ' $d_1$ '. After stretching the same wire length becomes ' $L_2$ ' and diameter ' $d_2$ '. The ratio of resistances before and after stretching is
- A)  $d_2^4 : d_1^4$       B)  $d_1^4 : d_2^4$       C)  $d_2^2 : d_1^2$       D)  $d_1^2 : d_2^2$
20. The molar specific heat of an ideal gas at constant pressure and constant volume is ' $C_p$ ' and ' $C_v$ ' respectively. If ' $R$ ' is the universal gas constant and the ratio of ' $C_p$ ' to ' $C_v$ ' is ' $\gamma$ ' then  $C_v =$
- A)  $\frac{1-\gamma}{1+\gamma}$       B)  $\frac{1+\gamma}{1-\gamma}$       C)  $\frac{\gamma-1}{R}$       D)  $\frac{R}{\gamma-1}$
21. In a capillary tube having area of cross-section ' $A$ ', water rises to a height ' $h$ '. If cross-sectional area is reduced to ' $\frac{A}{9}$ ', the rise of water in the capillary tube is
- A)  $4h$       B)  $3h$       C)  $2h$       D)  $h$
22. With forward biased mode, the p-n junction diode
- A) is one in which width of depletion layer increases  
B) is one in which potential barrier increases  
C) acts as closed switch  
D) acts as open switch
23. An alternating electric field of frequency ' $\nu$ ' is applied across the dees (radius  $R$ ) of a cyclotron to accelerate protons (mass  $m$ ). The operating magnetic field ' $B$ ' used and K.E. of the proton beam produced by it are respectively ( $e =$  charge on proton)
- A)  $\frac{2\pi m\nu}{e}, 2\pi^2 m\nu^2 R^2$       B)  $\frac{2\pi^2 m\nu}{e^2}, 4\pi^2 m\nu^2 R^2$   
C)  $\frac{\pi m\nu}{e}, \pi^2 m\nu^2 R^2$       D)  $\frac{2\pi^2 m^2 \nu^2}{e}, 2\pi^2 m^2 \nu^2 R^2$
24. A ray of light is incident normally on a glass slab of thickness 5 cm and refractive index 1.6. The time taken to travel by a ray from source to surface of slab is same as to travel through glass slab. The distance of source from the surface is
- A) 4 cm      B) 8 cm      C) 12 cm      D) 16 cm
25. A string is vibrating in its fifth overtone between two rigid supports 2.4 m apart. The distance between successive node and antinode is
- A) 0.1 m      B) 0.2 m      C) 0.6 m      D) 0.8 m
26. If  $\vec{A} = 3\hat{i} - 2\hat{j} + \hat{k}$ ,  $\vec{B} = \hat{i} - 3\hat{j} + 5\hat{k}$  and  $\vec{C} = 2\hat{i} + \hat{j} - 4\hat{k}$  form a right angled triangle then out of the following which one is satisfied?
- A)  $\vec{A} = \vec{B} + \vec{C}$  and  $A^2 = B^2 + C^2$       B)  $\vec{A} = \vec{B} + \vec{C}$  and  $B^2 = A^2 + C^2$   
C)  $\vec{B} = \vec{A} + \vec{C}$  and  $B^2 = A^2 + C^2$       D)  $\vec{B} = \vec{A} + \vec{C}$  and  $A^2 = B^2 + C^2$

SPACE FOR ROUGH WORK







27. A square frame ABCD is formed by four identical rods each of mass 'm' and length 'l'. This frame is in X-Y plane such that side AB coincides with X-axis and side AD along Y-axis. The moment of inertia of the frame about X-axis is
- A)  $\frac{5ml^2}{3}$       B)  $\frac{2ml^2}{3}$       C)  $\frac{4ml^2}{3}$       D)  $\frac{ml^2}{12}$
28. A unit vector is represented as  $(0.8\hat{i} + b\hat{j} + 0.4\hat{k})$ . Hence the value of 'b' must be
- A) 0.4      B)  $\sqrt{0.6}$       C) 0.2      D)  $\sqrt{0.2}$
29. Magnetic susceptibility for a paramagnetic and diamagnetic materials is respectively
- A) small, positive and small, positive      B) large, positive and small, negative  
C) small, positive and small, negative      D) large, negative and large, positive
30. A mass is suspended from a vertical spring which is executing S.H.M. of frequency 5 Hz. The spring is unstretched at the highest point of oscillation. Maximum speed of the mass is [acceleration due to gravity  $g = 10 \text{ m/s}^2$ ]
- A)  $2\pi \text{ m/s}$       B)  $\pi \text{ m/s}$       C)  $\frac{1}{2\pi} \text{ m/s}$       D)  $\frac{1}{\pi} \text{ m/s}$
31. The moment of inertia of a ring about an axis passing through the centre and perpendicular to its plane is 'I'. It is rotating with angular velocity ' $\omega$ '. Another identical ring is gently placed on it so that their centres coincide. If both the rings are rotating about the same axis then loss in kinetic energy is
- A)  $\frac{I\omega^2}{2}$       B)  $\frac{I\omega^2}{4}$       C)  $\frac{I\omega^2}{6}$       D)  $\frac{I\omega^2}{8}$
32. A bomb at rest explodes into 3 parts of same mass. The momentum of two parts is  $-3P\hat{i}$  and  $2P\hat{j}$  respectively. The magnitude of momentum of the third part is
- A) P      B)  $\sqrt{5}P$       C)  $\sqrt{11}P$       D)  $\sqrt{13}P$
33. In a photocell, frequency of incident radiation is increased by keeping other factors constant ( $\nu > \nu_0$ ), the stopping potential
- A) decreases      B) increases  
C) becomes zero      D) first decreases and then increases
34. A mass attached to one end of a string crosses top-most point on a vertical circle with critical speed. Its centripetal acceleration when string becomes horizontal will be ( $g =$  gravitational acceleration)
- A) g      B) 3g      C) 4g      D) 6g
35. The expression for electric field intensity at a point outside uniformly charged thin plane sheet is (d is the distance of point from plane sheet)
- A) independent of d      B) directly proportional to  $\sqrt{d}$   
C) directly proportional to d      D) directly proportional to  $\frac{1}{\sqrt{d}}$

SPACE FOR ROUGH WORK





36. When source of sound moves towards a stationary observer, the wavelength of sound received by him

- A) decreases while frequency increases
- B) remains the same whereas frequency increases
- C) increases and frequency also increases
- D) decreases while frequency remains the same

37. The deflection in galvanometer falls to  $\left(\frac{1}{4}\right)^{\text{th}}$  when it is shunted by  $3\Omega$ . If additional shunt of  $2\Omega$  is connected to earlier shunt, the deflection in galvanometer falls to

- A)  $\frac{1}{2}$
- B)  $\left(\frac{1}{3}\right)^{\text{rd}}$
- C)  $\left(\frac{1}{4}\right)^{\text{th}}$
- D)  $\left(\frac{1}{8.5}\right)^{\text{th}}$

38. A body is thrown from the surface of the earth with velocity 'u' m/s. The maximum height in m above the surface of the earth upto which it will reach is (R = radius of earth, g = acceleration due to gravity)

- A)  $\frac{u^2 R}{2gR - u^2}$
- B)  $\frac{2u^2 R}{gR - u^2}$
- C)  $\frac{u^2 R^2}{2gR^2 - u^2}$
- D)  $\frac{u^2 R}{gR - u^2}$

39. A series combination of  $N_1$  capacitors (each of capacity  $C_1$ ) is charged to potential difference '3V'. Another parallel combination of  $N_2$  capacitors (each of capacity  $C_2$ ) is charged to potential difference 'V'. The total energy stored in both the combinations is same. The value of  $C_1$  in terms of  $C_2$  is

- A)  $\frac{C_2 N_1 N_2}{9}$
- B)  $\frac{C_2 N_1^2 N_2^2}{9}$
- C)  $\frac{C_2 N_1}{9 N_2}$
- D)  $\frac{C_2 N_2}{9 N_1}$

40. Heat energy is incident on the surface at the rate of 1000 J/min. If coefficient of absorption is 0.8 and coefficient of reflection is 0.1 then heat energy transmitted by the surface in 5 minutes is

- A) 100 J
- B) 500 J
- C) 700 J
- D) 900 J

41. Two metal wires 'P' and 'Q' of same length and material are stretched by same load. Their masses are in the ratio  $m_1 : m_2$ . The ratio of elongations of wire 'P' to that of 'Q' is

- A)  $m_1^2 : m_2^2$
- B)  $m_2^2 : m_1^2$
- C)  $m_2 : m_1$
- D)  $m_1 : m_2$

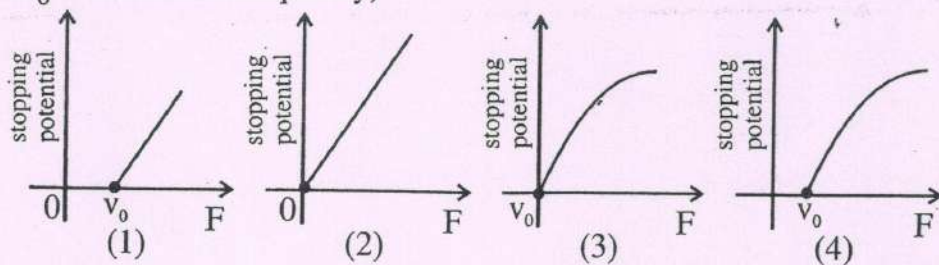
42. Let  $x = \left[\frac{a^2 b^2}{c}\right]$  be the physical quantity. If the percentage error in the measurement of physical quantities a, b and c is 2, 3 and 4 percent respectively then percentage error in the measurement of x is

- A) 7%
- B) 14%
- C) 21%
- D) 28%

SPACE FOR ROUGH WORK



43. Following graphs show the variation of stopping potential corresponding to the frequency of incident radiation ( $F$ ) for a given metal. The correct variation is shown in graph ( $\nu_0 =$  Threshold frequency)



- A) (1)                      B) (2)                      C) (3)                      D) (4)

44. In compound microscope, the focal length and aperture of the objective used is respectively

- A) large and large    B) large and small    C) short and large    D) short and small

45. The energy of an electron having de-Broglie wavelength ' $\lambda$ ' is ( $h =$  Planck's constant,  $m =$  mass of electron)

- A)  $\frac{h}{2m\lambda}$                       B)  $\frac{h^2}{2m\lambda^2}$                       C)  $\frac{h^2}{2m^2\lambda^2}$                       D)  $\frac{h^2}{2m^2\lambda}$

46. ' $n$ ' number of waves are produced on a string in 0.5 second. Now the tension in the string is doubled (Assume length and radius constant), the number of waves produced in 0.5 second for the same harmonic will be

- A)  $n$                       B)  $\sqrt{2}n$                       C)  $\frac{n}{\sqrt{2}}$                       D)  $\frac{n}{\sqrt{5}}$

47. The increase in energy of a metal bar of length ' $L$ ' and cross-sectional area ' $A$ ' when compressed with a load ' $M$ ' along its length is

( $Y =$  Young's modulus of the material of metal bar)

- A)  $\frac{FL}{2AY}$                       B)  $\frac{F^2L}{2AY}$                       C)  $\frac{FL}{AY}$                       D)  $\frac{F^2L^2}{2AY}$

48. The ratio of magnetic fields due to a bar magnet at the two axial points  $P_1$  and  $P_2$  which are separated from each other by 10 cm is 25 : 2. Point  $P_1$  is situated at 10 cm from the centre of the magnet. Magnetic length of the bar magnet is (Points  $P_1$  and  $P_2$  are on the same side of magnet and distance of  $P_2$  from the centre is greater than distance of  $P_1$  from the centre of magnet)

- A) 5 cm                      B) 10 cm                      C) 15 cm                      D) 20 cm

49. A satellite is revolving in a circular orbit at a height ' $h$ ' above the surface of the earth of radius ' $R$ '. The speed of the satellite in its orbit is one-fourth the escape velocity from the surface of the earth. The relation between ' $h$ ' and ' $R$ ' is

- A)  $h = 2R$                       B)  $h = 3R$                       C)  $h = 5R$                       D)  $h = 7R$

50. A pipe closed at one end has length 83 cm. The number of possible natural oscillations of air column whose frequencies lie below 1000 Hz are (velocity of sound in air = 332 m/s)

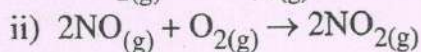
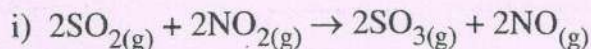
- A) 3                      B) 4                      C) 5                      D) 6

SPACE FOR ROUGH WORK



## CHEMISTRY

51. A certain reaction occurs in two steps as



In the reaction,

A)  $\text{NO}_{2(g)}$  is intermediate

B)  $\text{NO}_{(g)}$  is intermediate

C)  $\text{NO}_{(g)}$  is catalyst

D)  $\text{O}_{2(g)}$  is intermediate

52. Which among the following equations represents the first law of thermodynamics under isobaric conditions ?

A)  $\Delta U = q_p - P_{\text{ex}} \cdot \Delta V$

B)  $q_v = \Delta U$

C)  $\Delta U = W$

D)  $W = -q$

53. During galvanization of iron, which metal is used for coating iron surface ?

A) Copper

B) Zinc

C) Nickel

D) Tin

54. Formation of  $\text{PCl}_3$  is explained on the basis of what hybridisation of phosphorus atom ?

A)  $\text{SP}^2$

B)  $\text{SP}^3$

C)  $\text{SP}^3\text{d}$

D)  $\text{SP}^3\text{d}^2$

55. Identify the element that forms amphoteric oxide.

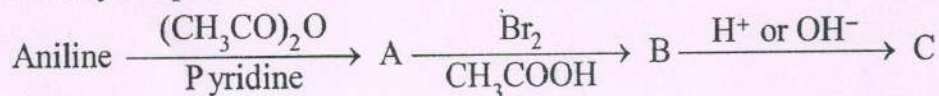
A) Carbon

B) Zinc

C) Calcium

D) Sulphur

56. Identify the product 'C' in the following reaction.



A) Acetanilide

B) p - Bromoacetanilide

C) p - Bromoaniline

D) o - Bromoaniline

57. Identify the functional group that has electron donating inductive effect.

A)  $-\text{COOH}$

B)  $-\text{CN}$

C)  $-\text{CH}_3$

D)  $-\text{NO}_2$

58. Which among the following metals crystallise as a simple cube ?

A) Polonium

B) Iron

C) Copper

D) Gold

59. Which among the following oxoacids of phosphorus shows a tendency of disproportionation ?

A) Phosphinic acid ( $\text{H}_3\text{PO}_2$ )

B) Orthophosphoric acid ( $\text{H}_3\text{PO}_4$ )

C) Phosphonic acid ( $\text{H}_3\text{PO}_3$ )

D) Pyrophosphoric acid ( $\text{H}_4\text{P}_2\text{O}_7$ )

60. What is the oxidation number of gold in the complex  $[\text{AuCl}_4]^{1-}$  ?

A) +4

B) +3

C) +2

D) +1

61. Which symbol replaces the unit of atomic mass, amu ?

A) u

B) A

C) M

D) n

SPACE FOR ROUGH WORK





62. Which of the following compounds reacts immediately with Lucas reagent ?  
 A)  $\text{CH}_3\text{CH}_2\text{OH}$  B)  $\text{CH}_3\text{CH}_2\text{CH}_2\text{OH}$   
 C)  $\text{CH}_3 - \underset{\text{OH}}{\text{CH}} - \text{CH}_3$  D)  $\text{CH}_3 - \overset{\text{CH}_3}{\underset{\text{OH}}{\text{C}}} - \text{CH}_3$
63. What is the catalyst used for oxidation of  $\text{SO}_2$  to  $\text{SO}_3$  in lead chamber process for manufacture of sulphuric acid ?  
 A) Nitric oxide B) Nitrous oxide C) Potassium iodide D) Dilute HCl
64. The number of moles of electrons passed when current of 2 A is passed through an solution of electrolyte for 20 minutes is  
 A)  $4.1 \times 10^{-4} \text{ mol e}^-$  B)  $1.24 \times 10^{-2} \text{ mol e}^-$   
 C)  $2.487 \times 10^{-2} \text{ mol e}^-$  D)  $2.487 \times 10^{-1} \text{ mol e}^-$
65. The molarity of urea (molar mass  $60 \text{ g mol}^{-1}$ ) solution by dissolving 15 g of urea in  $500 \text{ cm}^3$  of water is  
 A)  $2 \text{ mol dm}^{-3}$  B)  $0.5 \text{ mol dm}^{-3}$  C)  $0.125 \text{ mol dm}^{-3}$  D)  $0.0005 \text{ mol dm}^{-3}$
66. Which carbon atom of deoxy Ribose sugar in DNA does NOT contain  $-\overset{|}{\text{C}}-\text{OH}$  bond ?  
 A)  $\text{C}_5$  B)  $\text{C}_3$  C)  $\text{C}_2$  D)  $\text{C}_1$
67. Which of the following carboxylic acids is most reactive towards esterification ?  
 A)  $(\text{CH}_3)_3\text{CCOOH}$  B)  $(\text{CH}_3)_2\text{CHCOOH}$   
 C)  $\text{CH}_3\text{CH}_2\text{COOH}$  D)  $(\text{C}_2\text{H}_5)_2\text{CHCOOH}$
68. Molarity is  
 A) The number of moles of solute present in  $1 \text{ dm}^3$  volume of solution  
 B) The number of moles of solute dissolved in 1 kg of solvent  
 C) The number of moles of solute dissolved in 1 kg of solution  
 D) The number of moles of solute dissolved in  $100 \text{ dm}^3$  volume of solution
69. Which of the followings is a tricarboxylic acid ?  
 A) Citric acid B) Malonic acid C) Succinic acid D) Malic acid
70. What is the number of donar atoms in dimethylglyoximato ligand ?  
 A) 1 B) 2 C) 3 D) 4
71. In which substance does nitrogen exhibit the lowest oxidation state ?  
 A) nitrogen gas B) ammonia C) nitrous oxide D) nitric oxide
72. Which of the followings is most reactive towards addition reaction of hydrogen cyanide to form corresponding cyanohydrin ?  
 A) Acetone B) Formaldehyde C) Acetaldehyde D) Diethylketone
73. The most basic hydroxide from following is  
 A)  $\text{Pr}(\text{OH})_3$  ( $Z = 59$ ) B)  $\text{Sm}(\text{OH})_3$  ( $Z = 62$ )  
 C)  $\text{Ho}(\text{OH})_3$  ( $Z = 67$ ) D)  $\text{La}(\text{OH})_3$  ( $Z = 57$ )

SPACE FOR ROUGH WORK






74. What is the SI unit of density ?  
 A)  $\text{g cm}^{-3}$       B)  $\text{g m}^{-3}$       C)  $\text{kg m}^{-3}$       D)  $\text{kg cm}^{-3}$
75. Which of the following compounds does **NOT** undergo haloform reaction ?  
 A)  $\text{CH}_3 - \underset{\text{OH}}{\text{CH}} - \text{CH}_3$       B)  $\text{CH}_3 - \underset{\text{O}}{\text{C}} - \text{CH}_3$   
 C)  $\text{C}_2\text{H}_5 - \underset{\text{OH}}{\text{CH}} - \text{C}_2\text{H}_5$       D)  $\text{CH}_3 - \underset{\text{O}}{\text{C}} - \text{C}_2\text{H}_5$
76. Two moles of an ideal gas are allowed to expand from a volume of  $10 \text{ dm}^3$  to  $2 \text{ m}^3$  at  $300 \text{ K}$  against a pressure of  $101.325 \text{ KPa}$ . Calculate the work done.  
 A)  $-201.6 \text{ kJ}$       B)  $13.22 \text{ kJ}$       C)  $-810.6 \text{ J}$       D)  $-18.96 \text{ kJ}$
77. In which among the following solids, Schottky defect is **NOT** observed ?  
 A)  $\text{ZnS}$       B)  $\text{NaCl}$       C)  $\text{KCl}$       D)  $\text{CsCl}$
78. What are the products of auto-photolysis of water ?  
 A)  $\text{H}_2$  and  $\text{O}_2$       B) Steam      C)  $\text{H}_3\text{O}^+$  and  $\text{OH}^-$       D) Hydrogen peroxide
79. Bauxite, the ore of aluminium, is purified by which process ?  
 A) Hoopé's process      B) Hall's process      C) Mond's process      D) Liquation process
80. Phenol in presence of sodium hydroxide reacts with chloroform to form salicylaldehyde. The reaction is known as  
 A) Kolbe's reaction      B) Reimer-Tiemann reaction  
 C) Stephen reaction      D) Etard reaction
81. Which among the following elements of group-2 exhibits anomalous properties ?  
 A) Be      B) Mg      C) Ca      D) Ba
82. Excess of ammonia with sodium hypochloride solution in the presence of glue or gelatine gives  
 A)  $\text{NaNH}_2$       B)  $\text{NH}_2\text{NH}_2$       C)  $\text{N}_2$       D)  $\text{NH}_4\text{Cl}$
83. What is the density of solution of sulphuric acid used as an electrolyte in lead accumulator ?  
 A)  $1.5 \text{ gmL}^{-1}$       B)  $1.2 \text{ gmL}^{-1}$       C)  $1.8 \text{ gmL}^{-1}$       D)  $2.0 \text{ gmL}^{-1}$
84. Which of the following polymers is used to manufacture clothes for firefighters ?  
 A) Thiokol      B) Kevlar      C) Nomex      D) Dynel
85. Which element is obtained in the pure form by van Arkel method ?  
 A) Aluminium      B) Titanium      C) Silicon      D) Nickel
86. Which of the followings is **NOT** a tranquilizer ?  
 A) Meprobamate      B) Equanil  
 C) Chlordiazepoxide      D) Brompheniramine
87. Conversion of hexane into benzene involves the reaction of  
 A) hydration      B) hydrolysis      C) hydrogenation      D) dehydrogenation
88. The element that does **NOT** exhibit allotropy is  
 A) phosphorus      B) arsenic      C) antimony      D) bismuth

SPACE FOR ROUGH WORK





89. Which of the following reactions is used to prepare aryl fluorides from diazonium salts and fluoroboric acid ?  
 A) Sandmeyer reaction  
 B) Balz-Schiemann reaction  
 C) Gattermann reaction  
 D) Swarts reaction
90. The correct relation between elevation of boiling point and molar mass of solute is  
 A)  $M_2 = \frac{K_b \cdot W_2}{\Delta T_b \cdot W_1}$  B)  $M_2 = \frac{K_b \cdot W_1}{\Delta T_b \cdot W_2}$  C)  $M_2 = \frac{\Delta T_b \cdot K_b}{W_1 \cdot W_2}$  D)  $M_2 = \frac{\Delta T_b \cdot W_1}{K_b \cdot W_2}$
91. Which among the group - 15 elements does **NOT** exist as tetra atomic molecule ?  
 A) Nitrogen B) Phosphorus C) Arsenic D) Antimony
92. Identify the monosaccharide containing only one asymmetric carbon atom in its molecule.  
 A) Ribulose B) Ribose C) Erythrose D) Glyceraldehyde
93. Identify the oxidation states of titanium (Z = 22) and copper (Z = 29) in their colourless compounds.  
 A)  $Ti^{3+}, Cu^{2+}$  B)  $Ti^{2+}, Cu^{2+}$  C)  $Ti^{4+}, Cu^{1+}$  D)  $Ti^{4+}, Cu^{2+}$
94. Arenes on treatment with chlorine in presence of ferric chloride as a catalyst undergo what type of reaction ?  
 A) Electrophilic substitution B) Nucleophilic substitution  
 C) Electrophilic addition D) Nucleophilic addition
95. In case of R, S configuration the group having highest priority is  
 A)  $-NO_2$  B)  $-NH_2$  C)  $-CN$  D)  $-OH$
96. Lactic acid and glycolic acid are the monomers used for preparation of polymer  
 A) Nylon-2-nylon-6 B) Dextran  
 C) PHBV D) Buna-N
97. What is the geometry of water molecule ?  
 A) distorted tetrahedral B) tetrahedral  
 C) trigonal planer D) diagonal
98. With which halogen the reactions of alkanes are explosive ?  
 A) Fluorine B) Chlorine C) Bromine D) Iodine
99. Calculate the work done during combustion of 0.138 kg of ethanol,  $C_2H_5OH(l)$  at 300 K. Given :  $R = 8.314 \text{ Jk}^{-1}\text{mol}^{-1}$ , molar mass of ethanol =  $46 \text{ g mol}^{-1}$ .  
 A)  $-7482 \text{ J}$  B)  $7482 \text{ J}$  C)  $-2494 \text{ J}$  D)  $2494 \text{ J}$
100. Slope of the straight line obtained by plotting  $\log_{10}k$  against  $1/T$  represents what term ?  
 A)  $-E_a$  B)  $-2.303 E_a/R$  C)  $-E_a/2.303 R$  D)  $-E_a/R$

SPACE FOR ROUGH WORK

