

Section A: Q.1 – Q.10 Carry ONE mark each.	
Q.1	Which of the following is involved in innate immune response in higher mammals?
(A)	T cell antigen receptor
(B)	B cell antigen receptor
(C)	Toll-like receptor
(D)	Major histocompatibility complex-II molecule
Q.2	Which among the following belongs to the family “Retroviridae”?
(A)	Human Immunodeficiency virus
(B)	Ebola virus
(C)	Dengue virus
(D)	Influenza virus

Q.3	Which of the following is a glycolipid?
(A)	Cerebroside
(B)	Phosphatidylcholine
(C)	Phosphatidylserine
(D)	Cardiolipin
Q.4	Which of the following bacterial component contains “dipicolinic acid”?
(A)	Endospore
(B)	Capsule
(C)	Flagella
(D)	Pili

Q.5	The fossilization process in which mineral rich water penetrates through the pores of decomposed organic matter is known as _____.
(A)	Carbonization
(B)	Chemical fossilization
(C)	Petrifaction
(D)	Microfossilization
Q.6	A random fluctuation in gene frequency is called
(A)	Genetic drift
(B)	Genetic load
(C)	Panmixis
(D)	Genetic shift

Q.7	The number of "Barr Bodies" present in a somatic cell of a woman suffering from Turner syndrome is ____.
(A)	0
(B)	1
(C)	2
(D)	3
Q.8	Which of the following are produced by Mangrove trees to survive in the waterlogged swampy forests?
(A)	Trichomes
(B)	Pneumatophores
(C)	Spermatophores
(D)	Cambia

Q.9	Indeterminate growth in plants is due to the presence of perpetually undifferentiated tissues, called as _____.
(A)	Tracheids
(B)	Meristems
(C)	Parenchyma
(D)	Sclerenchyma
Q.10	The osmotic potential (ψ) of pure water is _____ MPa.
(A)	-1
(B)	0
(C)	0.1
(D)	10

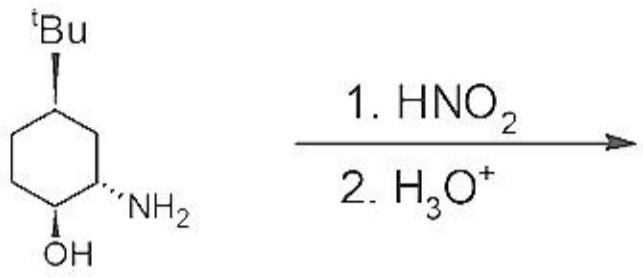
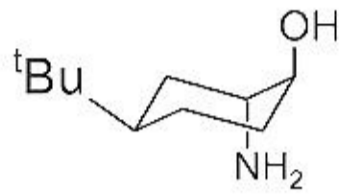
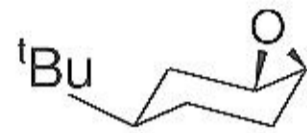

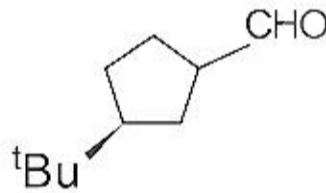
Section A: Q.11 – Q.30 Carry TWO marks each.	
Q.11	Bacteria containing a tuft of flagella that comes out from one pole is called ____.
(A)	Lophotrichous
(B)	Peritrichous
(C)	Monotrichous
(D)	Amphitrichous
Q.12	Which of the following activity is associated with <i>Klenow</i> fragment?
(A)	5'-3' exonuclease activity
(B)	5'-3' endonuclease activity
(C)	Polymerase activity
(D)	3'-5' endonuclease activity

Q.13	A frameshift mutation is caused by ____.
(A)	5-Bromouracil
(B)	Acridine
(C)	Glutathione
(D)	Hypoxanthine
Q.14	The zone of a pond system where respiration is more than production is called as ____.
(A)	Limnetic zone
(B)	Littoral zone
(C)	Epilimnion zone
(D)	Benthic zone

Q.15	An organism that causes obstruction of lymphatic system in humans is ____.
(A)	<i>Borrelia burgdorferi</i>
(B)	<i>Brucella abortus</i>
(C)	<i>Yersinia pestis</i>
(D)	<i>Wuchereria bancrofti</i>
Q.16	A man having a dominant genetic trait (TT genotype) can taste phenylthiocarbamide (PTC), marries a woman who cannot taste PTC. The PTC tasting ability of their biological son and daughter is
(A)	Son taster; Daughter non-taster
(B)	Daughter taster; Son non-taster
(C)	Both are non-tasters
(D)	Both are tasters

Q.17	Which of the following enzymes is absent in a person suffering from Alkaptonuria?
(A)	Tyrosinase
(B)	Homogentisic acid oxidase
(C)	Catechol dioxygenase
(D)	Phenylalanine hydroxylase
Q.18	The bacterium that can tolerate high concentrations of salt and also ferment mannitol is
(A)	<i>Staphylococcus aureus</i>
(B)	<i>Staphylococcus epidermis</i>
(C)	<i>Streptococcus pyogenes</i>
(D)	<i>Serratia marcescens</i>

Q.19	<p>Match the following</p> <table border="0" style="width: 100%;"> <thead> <tr> <th style="text-align: center;">Group I</th> <th style="text-align: center;">Group II</th> </tr> </thead> <tbody> <tr> <td>P) Streptomycin</td> <td>1) Inhibits beta-subunit of RNA polymerase</td> </tr> <tr> <td>Q) Cycloheximide</td> <td>2) Inhibits peptidyl transferase activity of 50S subunit</td> </tr> <tr> <td>R) Rifamycin</td> <td>3) Inhibits peptidyl transferase activity of 60S subunit</td> </tr> <tr> <td>S) Chloramphenicol</td> <td>4) Inhibits binding of formyl methionine tRNA to ribosome</td> </tr> </tbody> </table>	Group I	Group II	P) Streptomycin	1) Inhibits beta-subunit of RNA polymerase	Q) Cycloheximide	2) Inhibits peptidyl transferase activity of 50S subunit	R) Rifamycin	3) Inhibits peptidyl transferase activity of 60S subunit	S) Chloramphenicol	4) Inhibits binding of formyl methionine tRNA to ribosome
Group I	Group II										
P) Streptomycin	1) Inhibits beta-subunit of RNA polymerase										
Q) Cycloheximide	2) Inhibits peptidyl transferase activity of 50S subunit										
R) Rifamycin	3) Inhibits peptidyl transferase activity of 60S subunit										
S) Chloramphenicol	4) Inhibits binding of formyl methionine tRNA to ribosome										
(A)	P-1, Q-3, R-4, S-2										
(B)	P-4, Q-3, R-1, S-2										
(C)	P-2, Q-3, R-1, S-4										
(D)	P-3, Q-4, R-1, S-2										

Q.20	The major product formed in the given reaction is 
(A)	
(B)	
(C)	
(D)	

Q.21	DNA gyrase can
(A)	cut single-stranded DNA
(B)	relax supercoiled DNA
(C)	introduce negative supercoiling in DNA
(D)	not utilize ATP
Q.22	The stationary phase of cation-exchange chromatography can be
(A)	DEAE-cellulose
(B)	CM-cellulose
(C)	Sephadex G-50
(D)	Heparin-Sepharose

Q.23	Components of a Transmission Electron Microscope are
(A)	Electron gun, objective lens, positron beam, projector lens
(B)	Neutron beam, projector lens, objective lens, evacuated tube
(C)	Electron beam, projector lens, objective lens, condenser lens
(D)	X-ray beam, projector lens, objective lens, condenser lens
Q.24	In a honey bee population, the workers are infertile but protect the queen from intruders and help in reproduction. This is an example of
(A)	K selection
(B)	Sexual selection
(C)	Kin selection
(D)	Disruptive selection

Q.25	For an enzyme following Michaelis-Menten kinetics, when $[S]=K_M$ then, the velocity v is <i>([S] is substrate concentration, K_M is Michaelis constant, V_{max} is maximal velocity)</i>
(A)	$[S] \times V_{max}$
(B)	$0.75 \times V_{max}$
(C)	$0.5 \times V_{max}$
(D)	$K_M \times V_{max}$
Q.26	The net equation for aerobic glycolysis is
(A)	$\text{Glucose} + 2\text{ATP} \longrightarrow 2 \text{ lactate} + 2\text{ADP} + 2\text{P}_i$
(B)	$\text{Glucose} + 2\text{ADP} + 2\text{P}_i + 2\text{NAD}^+ \longrightarrow 2 \text{ pyruvate} + 2\text{ATP} + 2\text{NADH} + 2\text{H}_2\text{O} + 4\text{H}^+$
(C)	$\text{Glucose} + 2\text{ADP} + 2\text{P}_i \longrightarrow 2 \text{ pyruvate} + 2\text{ATP} + 2\text{H}_2\text{O}$
(D)	$\text{Glucose} + 2\text{ADP} + 2\text{P}_i + 2\text{NAD}^+ \longrightarrow 2 \text{ lactate} + 2\text{ATP} + 2\text{NADH} + 2\text{H}_2\text{O} + 4\text{H}^+$

Q. 27	In the electron transport chain, flavin mononucleotide (FMN) can adopt _____ as the highest oxidation state and is capable of accepting or donating _____ electrons, respectively.
(A)	2; 2 or 3
(B)	2; 1 or 2
(C)	3; 2 or 3
(D)	3; 1 or 2
Q.28	In bacteria, the σ factor that plays a major role in transcription during the stationary phase is
(A)	σ^{70}
(B)	σ^{54}
(C)	σ^{28}
(D)	σ^{32}

Q.29	A rise in cytosolic calcium ion concentration just after fertilization in a sea urchin egg leads to
(A)	Formation of fertilization envelope
(B)	Acrosomal reaction
(C)	Formation of vegetal pole
(D)	Formation of animal pole
Q.30	In a nephron, _____ follows the ascending limb of the “loop of Henle”.
(A)	Descending limb
(B)	Distal tubule
(C)	Collecting tubule
(D)	Proximal tubule

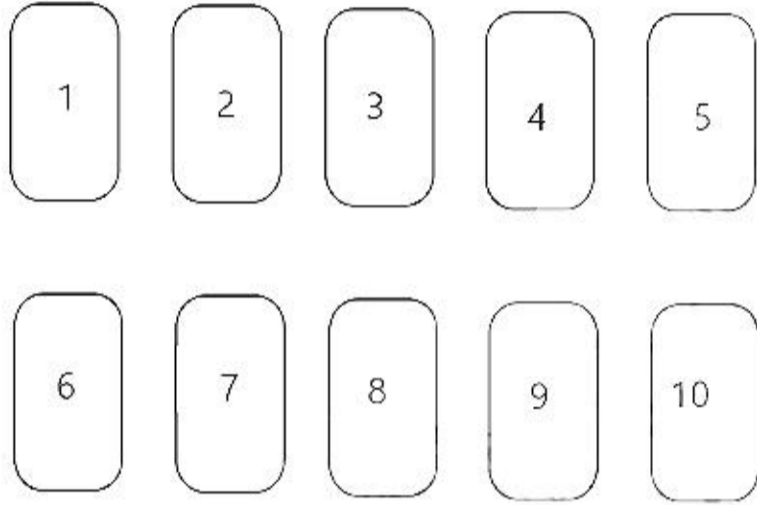
Section B: Q.31 – Q.40 Carry TWO marks each.	
Q.31	Transpirational pull that extends down to the roots in plants can be interrupted by
(A)	Process of cavitation
(B)	Process of gravitation
(C)	Formation of water vapor pockets
(D)	Positive pressure in xylem sap
Q.32	Transfer of plasmids into animal cells can be achieved by
(A)	Electroporation
(B)	Liposome-mediated process
(C)	Calcium chloride treatment
(D)	Sucrose treatment

Q.33	Archaeal cell membranes contain lipids that are
(A)	Ether linked
(B)	Ester linked
(C)	Branched alkyl chain
(D)	Linear alkyl chain
Q.34	Which of the following are producers in an ecological system?
(A)	Macrophytes
(B)	Phytoplanktons
(C)	Zooplanktons
(D)	Cyanobacteria

Q.35	Which of the following acts as wound hormones in plants?
(A)	Ethylene
(B)	Cytokinins
(C)	Abscisic acid
(D)	Dextrin
Q.36	The enriched media used to facilitate the growth of fastidious microorganisms are
(A)	Selenite F broth
(B)	Blood agar
(C)	Chocolate agar
(D)	Loeffler's serum

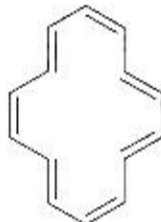
<p>Q.37</p>	<p>Match the bacterial structure to function</p> <p>(i) Cell wall (a) Virulence factor</p> <p>(ii) Glycocalyx (b) Selective permeability</p> <p> (c) Attachment to surfaces</p> <p> (d) Protection from osmotic lysis</p>
<p>(A)</p>	<p>(i)-(b), (ii)-(d)</p>
<p>(B)</p>	<p>(i)-(d), (ii)-(a)</p>
<p>(C)</p>	<p>(i)-(c), (ii)-(b)</p>
<p>(D)</p>	<p>(i)-(d), (ii)-(c)</p>

Q.38	<p>Identify the correct pairs:</p> <p>(i) Thermophile (a) grows optimal at 37 °C</p> <p>(ii) Mesophile (b) grows optimal at low temperature</p> <p>(iii) Psychrophile (c) grows optimal at high saline conditions</p> <p>(iv) Halophile (d) grows optimal at 67 °C</p>
(A)	(i)-(d)
(B)	(ii)-(b)
(C)	(iii)-(a)
(D)	(iv)-(c)
Q.39	<p>A single copy of an allele in sickle-cell heterozygous individuals reduces the frequency and severity of malaria. The reason for this is</p>
(A)	Low oxygen binding capacity of hemoglobin
(B)	Single amino acid substitution in hemoglobin deforms the red blood cells
(C)	Abnormal hemoglobin is toxic for malaria parasite
(D)	Malaria parasite escapes the deformed red blood cells

Section C: Q.41 – Q.50 Carry ONE mark each.	
Q.41	<p>A deck of ten cards is given to you as shown below in the figure. One card is drawn at random from this deck. The probability of selecting a number less than 9 is _____. (to one decimal place)</p> <div style="text-align: center;">  <p>The figure shows ten cards arranged in two rows of five. The top row contains cards numbered 1, 2, 3, 4, and 5. The bottom row contains cards numbered 6, 7, 8, 9, and 10.</p> </div>
Q.42	The average of all positive even integers less than or equal to 40 is _____.
Q.43	<p>The smallest positive (non-zero) integer “n” for which the expression</p> $\left(\frac{1+i}{1-i}\right)^n = 1$ <p>holds true, is _____.</p>

Q.44	Given that $A = (\sin\theta \cos\theta \tan\theta + \sin\theta \cos\theta \cot\theta)$, the value of A is
Q.45	An object is placed at the principal focus of a concave lens of focal length 10 cm. The image will be formed at _____ cm, between the optical center and the focus of the lens on the same side of the object.
Q.46	What is the maximum number of hydrogen bonds that a water molecule can make in the liquid state?
Q.47	How many pairs of autosomal chromosomes are there in normal humans?

Section C: Q.51 – Q.60 Carry TWO marks each.	
Q.51	A man throws a ball vertically up in the air with an initial velocity v_1 such that it reaches a height of 12 m with a speed of 12 m/s. If he throws the same ball vertically up with an initial velocity v_2 such that it reaches a maximum height of 12 m. Calculate v_1/v_2 . (<i>up to 2 decimal places</i>)
Q.52	What is the acceleration due to gravity (m/s^2) on the surface of a planet if its radius is $1/4^{\text{th}}$ that of earth and its mass is $1/80^{\text{th}}$ that of earth? Assume that the gravity on the surface of the earth is $10 m/s^2$.
Q.53	In a randomly mating population, the frequency of 'A' allele is 0.7. What is the frequency of 'Aa' genotype in the next generation according to Hardy-Weinberg's law? (<i>up to two decimal places</i>)
Q.54	The potential difference to accelerate an electron was quadrupled. By what factor does the <i>de Broglie</i> wavelength of the electron beam change?

Q.55	A 500 nm light is used for imaging in a confocal microscope. What will be the best resolution (in nm) of this microscope?
Q.56	Assuming the molecule shown below is aromatic, the value of “ n ” according to “Hückel’s rule” is 
Q.57	In an actively growing population from a single bacterium, 1,048,576 cells are present after 20 th generation. How many cells were there in 5 th generation?

Q.58	A double stranded DNA molecule of total 5000 base pairs long, has a melting temperature of 85 °C. What will be the % AT base pairs in this sample? (<i>up to one decimal place</i>).
Q.59	How many GTP molecules are required for the translocation of tRNA from P site to E site during translation elongation process in bacteria?
Q.60	Amongst the molecules given below, the total number of molecules that have at least one sp^2 hybridized atom is _____. C ₆ H ₆ , NO ₂ , BF ₃ , H ₂ O ₂ , SO ₂ , C ₂ H ₂ , L-Tryptophan