

















Practice, Learn and Achieve
Your Goal with Prepp

SSC CHSL Exam

Tier I Previous Paper

Simplifying
Government Exams

 SSC CHSL	 IAS EXAM	 RRB NTPC	 NTSE	 CDS
 SSC CGL	 CBSE UGC NET	 IBPS PO	 NDA	
 SBI PO	 IBPS CLERK	 AFCAT	 SSC JE	 CTET
 CSIR UGC NET	 CAPF	 IBPS RRB		

Combined Higher Secondary Level Examination 2019 Tier I

Roll Number	
Candidate Name	
Venue Name	
Exam Date	17/03/2020
Exam Time	10:00 AM - 11:00 AM
Subject	CHSL Tier 1

Section : English Language (Basic Knowledge)

Q.1 Select the most appropriate **ANTONYM** of the given word.

EXTENSIVE

- Ans 1. Intensive
 2. Lengthy
 3. Intricate
 4. Elaborate

Question ID : 8161611282

Status : Answered

Chosen Option : 1

Q.2 Select the most appropriate synonym of the given word.

TRUST (n)

- Ans 1. Safety
 2. Welfare
 3. Belief
 4. Ability

Question ID : 8161611290

Status : Answered

Chosen Option : 3

Q.3 Select the most appropriate option to fill in the blank.

Several environmentalists from the city conducted a meet to discuss issues related to the _____ pollution levels created by the growing number of pharmaceutical companies.

- Ans 1. raise in
 2. rise in
 3. rising from
 4. raising of

Question ID : 8161611293

Status : Answered

Chosen Option : 1

Q.4 Select the word with the incorrect spelling.

- Ans
- 1. Quantity
 - 2. Argument
 - 3. Quarrell
 - 4. Aisle

Question ID : **8161611286**
Status : **Answered**
Chosen Option : **3**

Comprehension:

In the following passage some words have been deleted. Fill in the blanks with the help of the alternatives given. Select the most appropriate option for each blank.

One of the most fascinating archaeological sites in Maharashtra, the Ellora Caves, date back (1)_____ about 1,500 years ago, and (2)_____ the epitome of Indian rock-cut architecture. (3)_____ 34 caves are actually Buddhist, Hindu and Jain religious monuments (4)_____ in the rock. They were given the (5)_____ of World Heritage Site in 1983. Created between the 6th and 10th century, the 12 Buddhist, 17 Hindu and 5 Jain caves carved in proximity at Ellora are proof of the religious harmony prevalent during this period of Indian history.

SubQuestion No : 5

Q.5 Select the most appropriate option to fill in blank No.1.

- Ans
- 1. at
 - 2. for
 - 3. to
 - 4. in

Question ID : **8161611273**
Status : **Answered**
Chosen Option : **3**

Comprehension:

In the following passage some words have been deleted. Fill in the blanks with the help of the alternatives given. Select the most appropriate option for each blank.

One of the most fascinating archaeological sites in Maharashtra, the Ellora Caves, date back (1)_____ about 1,500 years ago, and (2)_____ the epitome of Indian rock-cut architecture. (3)_____ 34 caves are actually Buddhist, Hindu and Jain religious monuments (4)_____ in the rock. They were given the (5)_____ of World Heritage Site in 1983. Created between the 6th and 10th century, the 12 Buddhist, 17 Hindu and 5 Jain caves carved in proximity at Ellora are proof of the religious harmony prevalent during this period of Indian history.

SubQuestion No : 6

Q.6 Select the most appropriate option to fill in blank No.2.

- Ans
- 1. is
 - 2. be
 - 3. were
 - 4. are

Question ID : **8161611274**
Status : **Answered**
Chosen Option : **4**

Comprehension:

In the following passage some words have been deleted. Fill in the blanks with the help of the alternatives given. Select the most appropriate option for each blank.

One of the most fascinating archaeological sites in Maharashtra, the Ellora Caves, date back (1)_____ about 1,500 years ago, and (2)_____ the epitome of Indian rock-cut architecture. (3)_____ 34 caves are actually Buddhist, Hindu and Jain religious monuments (4)_____ in the rock. They were given the (5)_____ of World Heritage Site in 1983.

Created between the 6th and 10th century, the 12 Buddhist, 17 Hindu and 5 Jain caves carved in proximity at Ellora are proof of the religious harmony prevalent during this period of Indian history.

SubQuestion No : 7

Q.7 Select the most appropriate option to fill in blank No.3.

- Ans 1. Many
 2. The
 3. An
 4. Few

Question ID : 8161611275

Status : Answered

Chosen Option : 2

Comprehension:

In the following passage some words have been deleted. Fill in the blanks with the help of the alternatives given. Select the most appropriate option for each blank.

One of the most fascinating archaeological sites in Maharashtra, the Ellora Caves, date back (1)_____ about 1,500 years ago, and (2)_____ the epitome of Indian rock-cut architecture. (3)_____ 34 caves are actually Buddhist, Hindu and Jain religious monuments (4)_____ in the rock. They were given the (5)_____ of World Heritage Site in 1983.

Created between the 6th and 10th century, the 12 Buddhist, 17 Hindu and 5 Jain caves carved in proximity at Ellora are proof of the religious harmony prevalent during this period of Indian history.

SubQuestion No : 8

Q.8 Select the most appropriate option to fill in blank No.4.

- Ans 1. carved
 2. created
 3. erected
 4. constructed

Question ID : 8161611276

Status : Answered

Chosen Option : 1

Comprehension:

In the following passage some words have been deleted. Fill in the blanks with the help of the alternatives given. Select the most appropriate option for each blank.

One of the most fascinating archaeological sites in Maharashtra, the Ellora Caves, date back (1)_____ about 1,500 years ago, and (2)_____ the epitome of Indian rock-cut architecture. (3)_____ 34 caves are actually Buddhist, Hindu and Jain religious monuments (4)_____ in the rock. They were given the (5)_____ of World Heritage Site in 1983.

Created between the 6th and 10th century, the 12 Buddhist, 17 Hindu and 5 Jain caves carved in proximity at Ellora are proof of the religious harmony prevalent during this period of Indian history.

SubQuestion No : 9

Q.9 Select the most appropriate option to fill in blank No.5.

- Ans
- 1. role
 - 2. symbol
 - 3. status
 - 4. function

Question ID : 8161611277

Status : Answered

Chosen Option : 3

Q.10 Given below are four jumbled sentences. Select the option that gives their correct order.

- A. Ibn Al-Haitham wrote a book in seven volumes namely 'Kitāb al-Manāẓir' also known as 'The Book of Optics.'
- B. However, during the medieval period, the notable work of an Arab writer and scientist, Ibn Al-Haitham revolutionised the concept of physics.
- C. During the ancient period, the development of Physics took place simultaneously with the development of astronomy.
- D. In this book, Ibn Al-Haitham disproved the ancient Greek concept of vision and introduced a new theory.

- Ans
- 1. BCDA
 - 2. CBAD
 - 3. ADBC
 - 4. ACBD

Question ID : 8161611279

Status : Answered

Chosen Option : 2

Q.11 Select the segment in the sentence, which contains the grammatical error.

Did you know whether we can exchange the dress if my sister doesn't like it?

- Ans
- 1. we can exchange the dress
 - 2. Did you know whether
 - 3. if my sister
 - 4. doesn't like it

Question ID : 8161611270

Status : Answered

Chosen Option : 2

Q.12 Select the alternative that will improve the underlined part of the sentence. In case there is no improvement select 'No improvement'.

I had no informations about the bank strike so I went there yesterday.

- Ans
- 1. no information about
 - 2. not got informations about
 - 3. No improvement
 - 4. no informations concerning

Question ID : 8161611280
Status : Answered
Chosen Option : 1

Q.13 Select the word which means the same as the group of words given.

A large natural or artificial lake used as a source of water supply

- Ans
- 1. Reservoir
 - 2. Pool
 - 3. Creek
 - 4. Pond

Question ID : 8161611289
Status : Answered
Chosen Option : 1

Q.14 Select the most appropriate synonym of the given word.

ALLURING

- Ans
- 1. Deceitful
 - 2. Distracting
 - 3. Cheating
 - 4. Attractive

Question ID : 8161611291
Status : Answered
Chosen Option : 4

Q.15 Select the most appropriate meaning of the underlined idiom in the given sentence.

A lot of work has gone on behind the scenes for the special event which is being planned next week.

- Ans
- 1. For spreading the news
 - 2. In the theatre
 - 3. Unknown to everyone
 - 4. To complete the arrangements

Question ID : 8161611285
Status : Answered
Chosen Option : 3

Q.16 Select the most appropriate meaning of the underlined idiom.

Hats off to someone

- Ans
- 1. Give hats to
 - 2. Announce a prize for
 - 3. Make new hats for
 - 4. Congratulations to

Question ID : 8161611284
Status : Answered
Chosen Option : 4

Q.17 Given below are four jumbled sentences. Select the option that gives their correct order.

- A. "It is mine. I saw it first," claimed one cat.
- B. Suddenly they spotted a loaf of bread lying beneath a tree.
- C. Once upon a time, two cats were passing through a street.
- D. Both pounced upon it and caught the loaf at the same time.

- Ans
- 1. ADBC
 - 2. DBCA
 - 3. BADC
 - 4. CBDA

Question ID : 8161611278
Status : Answered
Chosen Option : 4

Q.18 Select the alternative that will improve the underlined part of the sentence. In case there is no improvement select 'No improvement'.

Harry and Meghan have decided to work and become financially independent.

- Ans
- 1. have decided to work and became
 - 2. have decide to work and become
 - 3. No improvement
 - 4. has decided to work and become

Question ID : 8161611281
Status : Answered
Chosen Option : 1

Q.19 Select the option that is the direct form of the sentence.

The doctor advised Jaya to put the eye drops into her eyes four times a day from the next day.

- Ans
- 1. The doctor had advised Jaya, "From the next day you put the eye drops into your eyes four times a day."
 - 2. The doctor advised Jaya, "From tomorrow put the eye drops into your eyes four times a day."
 - 3. The doctor advises Jaya, "From the next day put the eye drops into your eyes four times a day."
 - 4. The doctor advised Jaya, "From tomorrow put the eye drops into her eyes four times a day."

Question ID : 8161611269
Status : Answered
Chosen Option : 2

Q.20 Select the segment in the sentence, which contains the grammatical error.

They had to wait for the luggages to be put into the cab before they themselves got into it.

- Ans
- 1. to be put into the cab
 - 2. for the luggages
 - 3. They had to wait
 - 4. before they themselves got into it

Question ID : 8161611271
Status : Answered
Chosen Option : 2

Q.21 Select the option that is the passive form of the sentence.

The sub-committee is presenting its report in a week's time.

- Ans
- 1. The report of the sub-committee has been presented in a week's time.
 - 2. The report of the sub-committee is being presented in a week's time.
 - 3. The report of the sub-committee is presenting in a week's time.
 - 4. The report of the sub-committee had been presented in a week's time.

Question ID : 8161611268
Status : Answered
Chosen Option : 2

Q.22 Select the wrongly spelt word.

- Ans
- 1. Extempore
 - 2. Expedition
 - 3. Experiment
 - 4. Extinct

Question ID : 8161611287
Status : Answered
Chosen Option : 2

Q.23 Select the most appropriate **ANTONYM** of the given word.

ABBREVIATE

- Ans
- 1. Oppose
 - 2. Challenge
 - 3. Dispute
 - 4. Expand

Question ID : **8161611283**
Status : **Answered**
Chosen Option : **4**

Q.24 Select the word which means the same as the group of words given.

Close fitting cover for a sword or knife

- Ans
- 1. Shield
 - 2. Screen
 - 3. Sheath
 - 4. Guard

Question ID : **8161611288**
Status : **Answered**
Chosen Option : **3**

Q.25 Select the most appropriate option to fill in the blank.

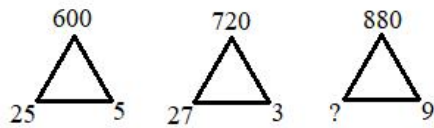
Astronomy enthusiasts and sky gazers will be able to watch six eclipses in 2020, but only three of them are expected to be _____ in India.

- Ans
- 1. exposed
 - 2. evident
 - 3. revealed
 - 4. visible

Question ID : **8161611292**
Status : **Answered**
Chosen Option : **4**

Section : **General Intelligence**


Q.1 Select the number that can replace the question mark (?) in the following pattern.



- Ans 1. 31
 2. 21
 3. 23
 4. 17

Question ID : 8161611298
 Status : Answered
 Chosen Option : 2

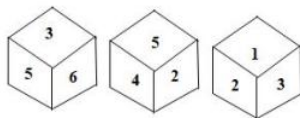
Q.2 Select the number that can replace the question mark (?) in the following pattern.



- Ans 1. 46
 2. 23
 3. 10
 4. 25

Question ID : 8161611297
 Status : Answered
 Chosen Option : 2

Q.3 Three different positions of the same dice are shown. Select the number that will be on the face opposite to the one having 5.



- Ans 1. 4
 2. 1
 3. 6
 4. 3

Question ID : 8161611312
 Status : Answered
 Chosen Option : 2

Q.4 Select the option in which the given figure is embedded. (Rotation is not allowed)

Question figure:



Ans

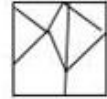
1.



2.



3.



4.



Question ID : 8161611315

Status : Answered

Chosen Option : 2

Q.5 Select the option that is related to the third number in the same way as the second number is related to the first number.

27 : 125 :: 343 : ?

Ans

1. 1000

2. 512

3. 729

4. 1343

Question ID : 8161611296

Status : Answered

Chosen Option : 3

Q.6 Read the given statements and conclusions carefully. Assuming that the information given in the statements is true, even if it appears to be at variance with commonly known facts, decide which of the given conclusions logically follow(s) from the statements.

Statements:

All woods are roots.

All fruits are roots.

No woods are a fruit.

Conclusion:

(I) Some roots are fruits.

(II) All roots are woods.

- Ans**
- 1. Neither conclusion I nor conclusion II follows
 - 2. Only conclusion I follows.
 - 3. Only conclusion II follows.
 - 4. Both conclusion I and II follows

Question ID : 8161611311

Status : Answered

Chosen Option : 2

Q.7 Select the option that is related to the third term in the same way as the second term is related to the first term.

CAG : GEK :: HEL : ?

- Ans**
- 1. LEP
 - 2. LIP
 - 3. GAC
 - 4. INP

Question ID : 8161611305

Status : Answered

Chosen Option : 2

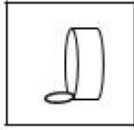
Q.8 Select the correct mirror image of the given figure when a mirror is placed on the line PQ.

Question figure:



Ans

✓ 1.




✗ 2.



✗ 3.



✗ 4.



Question ID : 8161611317

Status : Answered

Chosen Option : 1

Q.9 Choose the correct cluster of letters to complete the given series.

_ bac _ ac _ acb _ _ ba

Ans

✓ 1. c, b, b, a, c

✗ 2. c, a, b, b, c

✗ 3. a, c, c, b, b

✗ 4. a, b, b, a, c

Question ID : 8161611304

Status : Answered

Chosen Option : 1

Q.10 Four words have been given, out of which three are alike in some manner and one is different. Select the odd one.

- Ans 1. Foal
 2. Howl
 3. Caw
 4. Chirp

Question ID : 8161611310
 Status : Answered
 Chosen Option : 1

Q.11 The sequence of folding a piece of paper and the manner in which the folded paper has been cut is shown in the following figures. How would this paper look when unfolded?

Question figure:



Ans

- 1.
- 2.
- 3.
- 4.

Question ID : 8161611316
 Status : Answered
 Chosen Option : 4

Q.12 Of the four given equations, the first three are solved on the basis of a certain system. Find the correct answer for the unsolved fourth equation on the same basis.

$6 * 5 = 91$

$8 * 7 = 169$

$10 * 7 = 211$

$22 * 5 = ?$

- Ans
- 1. 993
 - 2. 331
 - 3. 678
 - 4. 845

Question ID : **8161611294**
 Status : **Not Answered**
 Chosen Option : --

Q.13 Select the number that can replace the question mark (?) in the following series.

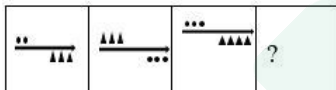
213, 217, 233, 269, ?

- Ans
- 1. 312
 - 2. 296
 - 3. 428
 - 4. 333

Question ID : **8161611301**
 Status : **Answered**
 Chosen Option : 4

Q.14 Select the figure that can replace the question mark (?) in the following figure series.

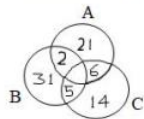
Question figure:



- Ans
- 1.
 - 2.
 - 3.
 - 4.

Question ID : **8161611313**
 Status : **Answered**
 Chosen Option : 2

Q.15 In the given Venn diagram, A denotes mangoes, B denotes bananas, C denotes apples, and the numbers in each section represent the number of persons who like those fruits. How many persons like only bananas?



- Ans**
- 1. 33
 - 2. 31
 - 3. 38
 - 4. 7

Question ID : **8161611318**

Status : **Answered**

Chosen Option : 2

Q.16 Select the letter that can replace the question mark (?) in the following series.

A, C, E, D, C, E, G, F, ?

- Ans**
- 1. C
 - 2. H
 - 3. D
 - 4. E

Question ID : **8161611306**

Status : **Answered**

Chosen Option : 4

Q.17 Four numbers have been given, out of which three are alike in some manner and one is different. Select the one that is different.

- Ans**
- 1. 256
 - 2. 144
 - 3. 81
 - 4. 676

Question ID : **8161611300**

Status : **Answered**

Chosen Option : 4

Q.18 In a certain code language, RUMMY is written as QVLNX. How is CHESS written in that code?

- Ans**
- 1. BGFTR
 - 2. BIFRT
 - 3. BGDTR
 - 4. BIDTR

Question ID : **8161611302**

Status : **Answered**

Chosen Option : 4

Q.19 Select the option that does NOT belong to the given series:

EC, H, HF, N, KI, U

- Ans
- 1. N
 - 2. EC
 - 3. HF
 - 4. U

Question ID : 8161611309
Status : Not Answered
Chosen Option : --

Q.20 Select the option that is related to the third word in the same way as the second word is related to the first word.

Farmer : Field :: Artist : ?

- Ans
- 1. Actor
 - 2. Action
 - 3. Theatre
 - 4. Hero

Question ID : 8161611308
Status : Answered
Chosen Option : 3

Q.21 If '#' means '-', '&' means '+', '@' means 'x' and '+' means '+', then $15 @ 2 + 900 \& 30 \# 10 = ?$

- Ans
- 1. 21
 - 2. 600
 - 3. 50
 - 4. 310

Question ID : 8161611295
Status : Answered
Chosen Option : 3

Q.22 Select the number that can replace the question mark (?) in the following series.

126, 217, 344, ?

- Ans
- 1. 729
 - 2. 521
 - 3. 513
 - 4. 512

Question ID : 8161611299
Status : Not Answered
Chosen Option : --

Q.23 If 683 is coded as FOX, 654 is FIN, 4581 is NIOC, then what will be the code of 654513?

- Ans**
- 1. FINICX
 - 2. FINNCX
 - 3. FIXICN
 - 4. FNINXC

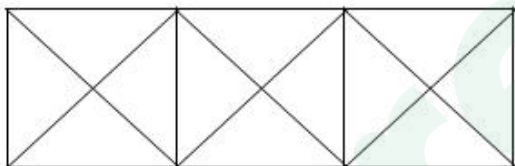
Question ID : **8161611303**
 Status : **Answered**
 Chosen Option : **1**

Q.24 P is the brother of Q. R is the daughter of Q. S is the sister of P. Q is sister of S. T is the brother of R. Who is the uncle of T?

- Ans**
- 1. Q
 - 2. C
 - 3. S
 - 4. P

Question ID : **8161611307**
 Status : **Answered**
 Chosen Option : **4**

Q.25 Find the number of triangles in the given figure.



- Ans**
- 1. 24
 - 2. 18
 - 3. 28
 - 4. 46

Question ID : **8161611314**
 Status : **Answered**
 Chosen Option : **3**

Section : Quantitative Aptitude(Basic Arithmetic Skill)

Q.1 Sohan sold a plot for ₹2,55,000 at a 15% loss. At what price should he sell the plot to gain a 10% profit?

- Ans
- 1. ₹3,33,000
 - 2. ₹3,30,000
 - 3. ₹3,33,300
 - 4. ₹3,00,000

Question ID : 8161611325
Status : Answered
Chosen Option : 2

Q.2 The difference between two numbers is 43 and their product is 50. Find the sum of their squares.

- Ans
- 1. 1947
 - 2. 1946
 - 3. 1948
 - 4. 1949

Question ID : 8161611332
Status : Answered
Chosen Option : 4

Q.3 Two sides of a triangle are of length 3 cm and 8 cm. If the length of the third side is 'x' cm, then:

- Ans
- 1. $5 < x$
 - 2. $5 < x < 11$
 - 3. $0 < x < 11$
 - 4. $x > 11$

Question ID : 8161611330
Status : Answered
Chosen Option : 2

Q.4 A dealer marks his goods at 30% above the cost price. Then he allows 35% discount on it. What would be his loss percentage?

- Ans
- 1. 16.5%
 - 2. 17.5%
 - 3. 18.5%
 - 4. 15.5%

Question ID : 8161611323
Status : Answered
Chosen Option : 4

Q.5 Which of the following numbers will completely divide $7^{81} + 7^{82} + 7^{83}$?

- Ans 1. 399
 2. 389
 3. 387
 4. 397

Question ID : 8161611335
Status : Answered
Chosen Option : 1

Q.6 The difference of simple interest on a sum of money for 8 years and 10 years is ₹200. If the rate of interest is 10 % p.a, then what is the sum of money?

- Ans 1. ₹1,000
 2. ₹1,400
 3. ₹1,600
 4. ₹1,200

Question ID : 8161611327
Status : Answered
Chosen Option : 1

Q.7 If M is the mid-point of the side BC of ΔABC , and the area of ΔABM is 18 cm^2 , then the area of ΔABC is:

- Ans 1. 30 cm^2
 2. 34 cm^2
 3. 36 cm^2
 4. 32 cm^2

Question ID : 8161611331
Status : Answered
Chosen Option : 3

Q.8 If $a^3 + b^3 = 20$ and $a + b = 5$, then find the value of $a^4 + b^4$.

- Ans 1. 25
 2. 26
 3. 24
 4. 23

Question ID : 8161611333
Status : Answered
Chosen Option : 4

Q.9

Find the value of $\frac{\cos 30^\circ - \sin 30^\circ}{\sin 60^\circ + \cos 60^\circ}$.

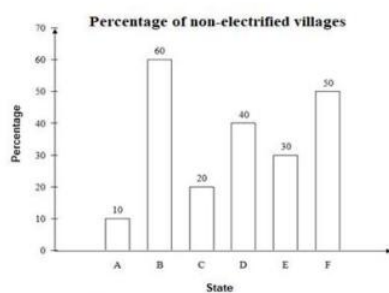
- Ans
- 1. $2 + \sqrt{3}$
 - 2. $2 - \sqrt{3}$
 - 3. $1 + \sqrt{3}$
 - 4. $1 - \sqrt{3}$

Question ID : 8161611337

Status : Answered

Chosen Option : 2

Q.10 The given bar graph represents the Percentage of non-electrified villages in 6 states A, B, C, D, E and F. Study the graph and answer the question that follows.



How many states have at most 30% or less non-electrified villages?

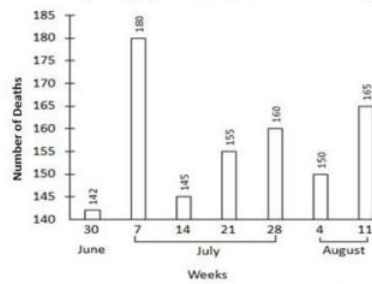
- Ans
- 1. 3
 - 2. 4
 - 3. 1
 - 4. 2

Question ID : 8161611340

Status : Answered

Chosen Option : 1

Q.11 The following bar graph shows the number of deaths from road accidents occurred during the rainy season in the year 1992. Study the graph carefully and answer the question.



Between which two consecutive weeks was the fall in the number of deaths the greatest?

- Ans**
- 1. 7 July to 14 July
 - 2. 28 July to 4 August
 - 3. 30 June to 7 July
 - 4. 21 July to 28 July

Question ID : 8161611341

Status : Answered

Chosen Option : 1

Q.12 How much should be added to each term of 4 : 7 so that it becomes

2 : 3?

- Ans**
- 1. 3
 - 2. 4
 - 3. 2
 - 4. 1

Question ID : 8161611326

Status : Answered

Chosen Option : 3

Q.13 X and Y together can finish a piece of work in 15 days, while Y alone can finish it in 40 days. X alone can finish the work in:

- Ans**
- 1. 24 days
 - 2. 26 days
 - 3. 25 days
 - 4. 23 days

Question ID : 8161611319

Status : Answered

Chosen Option : 1

Q.14 If $x + y = 4$, $xy = 2$, $y + z = 5$, $yz = 3$, $z + x = 6$ and $zx = 4$, then find the value of $x^3 + y^3 + z^3 - 3xy$.

- Ans
- 1. 150.75
 - 2. 152.75
 - 3. 151.75
 - 4. 153.75

Question ID : **8161611334**
Status : **Not Answered**
Chosen Option : --

Q.15 A man walks from point X to Y at a speed of 20 km/h, but comes back from point Y to X at a speed of 25 km/h. Find his average speed.

- Ans
- 1. $22\frac{2}{9}$ km/h
 - 2. $23\frac{2}{9}$ km/h
 - 3. $25\frac{2}{9}$ km/h
 - 4. $24\frac{2}{9}$ km/h

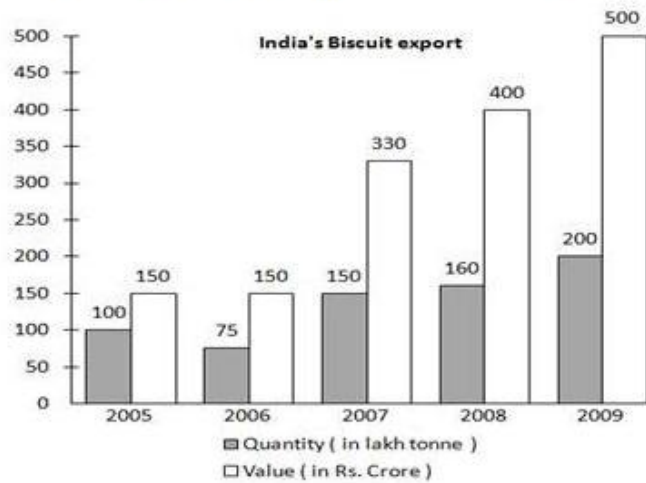
Question ID : **8161611320**
Status : **Answered**
Chosen Option : 1

Q.16 If $\sec^2 x - 3\sec x + 2 = 0$, then the value of x ($0 < x < 90^\circ$) is:

- Ans
- 1. 45°
 - 2. 15°
 - 3. 60°
 - 4. 30°

Question ID : **8161611339**
Status : **Answered**
Chosen Option : 3

Q.17 Study the following graph and answer the question.



In which year was the value per tonne the minimum?

- Ans 1. 2005
 2. 2007
 3. 2009
 4. 2006

Question ID : 8161611343
 Status : Answered
 Chosen Option : 1

Q.18 The perimeter of a rectangle is 50 cm. Its area and length are in the ratio of 5 : 1. Find the length of the rectangle.

- Ans 1. 15 cm
 2. 20 cm
 3. 18 cm
 4. 22 cm

Question ID : 8161611321
 Status : Answered
 Chosen Option : 2

Q.19 Sachin's income is 25% more than Dileep's income. By how much percentage is Dileep's income less than Sachin's income?

- Ans 1. 15%
 2. 20%
 3. 18%
 4. 22%

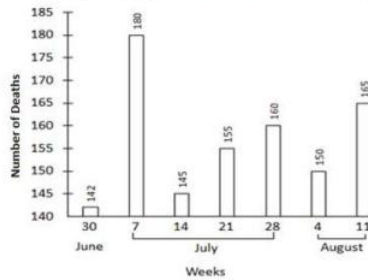
Question ID : 8161611324
 Status : Answered
 Chosen Option : 2

Q.20 What will come at place of x , ($x < 10$) for $\frac{(132 + 12 \times x - 3 \times 3)}{(5^2 - 6 \times 4 + x^2)} = 1$?

- Ans
- 1. 2
 - 2. 4
 - 3. 3
 - 4. 1

Question ID : 8161611336
Status : Answered
Chosen Option : 4

Q.21 The following bar graph shows the number of deaths from road accidents occurred during the rainy season in the year 1992. Study the graph carefully and answer the question.



Between which two consecutive weeks was the rise in the number of deaths the greatest?

- Ans
- 1. 21 July to 28 July
 - 2. 14 July to 21 July
 - 3. 4 August to 11 August
 - 4. 30 June to 7 July

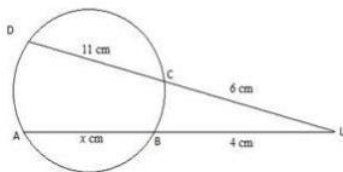
Question ID : 8161611342
Status : Answered
Chosen Option : 4

Q.22 A 5 cm long perpendicular is drawn from the centre of a circle to a 24 cm long chord. Find the diameter of the circle.

- Ans
- 1. 32 cm
 - 2. 13 cm
 - 3. 30 cm
 - 4. 26 cm

Question ID : 8161611328
Status : Answered
Chosen Option : 4

Q.23 In the given figure, chords AB and CD are intersecting each other at point L. Find the length of AB.



- Ans
- 1. 22.5 cm
 - 2. 21.5 cm
 - 3. 24.5 cm
 - 4. 23.5 cm

Question ID : 8161611329
Status : Answered
Chosen Option : 4

Q.24 A batsman in his 11th inning makes a score of 77 runs, thereby increasing his average scores by 3. What is his average score after the 11th inning?

- Ans
- 1. 46
 - 2. 49
 - 3. 47
 - 4. 48

Question ID : 8161611322
Status : Answered
Chosen Option : 3

Q.25 If $\operatorname{cosec}\theta + \cot\theta = 2$, then $\sin\theta$ is:

- Ans
- 1. $\frac{3}{5}$
 - 2. $\frac{2}{5}$
 - 3. $\frac{3}{4}$
 - 4. $\frac{4}{5}$

Question ID : 8161611338
Status : Answered
Chosen Option : 1

Section : General Awareness

Q.1 Which is the largest river island in the world?

- Ans 1. Majuli Island
 2. Srirangam Island
 3. Agatti Island
 4. Bhavani Island

Question ID : **8161611356**
Status : **Answered**
Chosen Option : 1

Q.2 Which of the following is a water soluble vitamin?

- Ans 1. Vitamin C
 2. Vitamin D
 3. Vitamin A
 4. Vitamin K

Question ID : **8161611355**
Status : **Not Answered**
Chosen Option : --

Q.3 Which of the following is a pension scheme introduced by the Government of India exclusively for senior citizens in May 2017?

- Ans 1. PMGAY
 2. PMVVY
 3. PMMVY
 4. PMGSY

Question ID : **8161611352**
Status : **Not Answered**
Chosen Option : --

Q.4 Mekhela Chador' is a traditional dress from the state of:

- Ans 1. Tripura
 2. Odisha
 3. West Bengal
 4. Assam

Question ID : **8161611347**
Status : **Not Answered**
Chosen Option : --

Q.5 _____ is the tube that carries urine from the kidney to the urinary bladder.

- Ans 1. Ureter
 2. Urethra
 3. Sphincter
 4. Aorta

Question ID : 8161611353
Status : Answered
Chosen Option : 2

Q.6 As of January 2020, who held the title of India's youngest chess grandmaster?

- Ans 1. D Gukesh
 2. Rameshbabu Praggnanandhaa
 3. Viswanathan Anand
 4. Parimarjan Negi

Question ID : 8161611368
Status : Answered
Chosen Option : 2

Q.7 Which of the following is an example of a Chola empire temple?

- Ans 1. Badami cave temple
 2. Chennakesava temple
 3. Airavateswara temple
 4. Virupaksha temple

Question ID : 8161611346
Status : Not Answered
Chosen Option : --

Q.8 Flagella are the hair-like structures which act as organelles of locomotion in which of the following organisms?

- Ans 1. Amoeba
 2. Bacteria
 3. Virus
 4. Paramecium

Question ID : 8161611354
Status : Answered
Chosen Option : 4

Q.9 River Sharavati plunges as which of the following waterfalls?

- Ans
- 1. Soochipara
 - 2. Athirapally
 - 3. Hogenakkal
 - 4. Gerusoppe

Question ID : **8161611358**
Status : **Not Answered**
Chosen Option : --

Q.10 In which city is Indian Railway-Rail Coach Factory located?

- Ans
- 1. Kapurthala
 - 2. Chennai
 - 3. Bengaluru
 - 4. Chittaranjan

Question ID : **8161611359**
Status : **Answered**
Chosen Option : 1

Q.11 What was the weight of the Chandrayaan-2 spacecraft launched in July 2019?

- Ans
- 1. 3.3 tonne
 - 2. 3.8 tonne
 - 3. 4.3 tonne
 - 4. 2.9 tonne

Question ID : **8161611350**
Status : **Not Answered**
Chosen Option : --

Q.12 In which year was UNICEF founded?

- Ans
- 1. 1948
 - 2. 1946
 - 3. 1945
 - 4. 1949

Question ID : **8161611361**
Status : **Answered**
Chosen Option : 2

Q.13 As of Feb 2020, how many members represent the state of Uttar Pradesh in Lok Sabha?

- Ans
- 1. 48
 - 2. 80
 - 3. 62
 - 4. 39

Question ID : 8161611364
Status : Answered
Chosen Option : 2

Q.14 Who among the following is the co-founder of Twitter?

- Ans
- 1. Tim Berners-Lee
 - 2. Jack Dorsey
 - 3. Narayan Murthy
 - 4. Bill Gates

Question ID : 8161611344
Status : Not Answered
Chosen Option : --

Q.15 As of January 2020, who held the national record in both, 800 m and 1500 m sprint events?

- Ans
- 1. Ayyasamy Dharun
 - 2. Avinash Sable
 - 3. Muhammad Anas
 - 4. Jinson Johnson

Question ID : 8161611367
Status : Not Answered
Chosen Option : --

Q.16 Sachin Tendulkar scored his first ODI century in his ____ match.

- Ans
- 1. 76th
 - 2. 79th
 - 3. 78th
 - 4. 77th

Question ID : 8161611366
Status : Not Answered
Chosen Option : --

Q.17 Laterite soil is rich in:

- Ans
- 1. Potassium
 - 2. Iron oxide
 - 3. Phosphorus
 - 4. Calcium carbonate

Question ID : 8161611357
Status : Answered
Chosen Option : 3

Q.18 Who is the author of the book 'Kerala: God's Own Country'?

- Ans
- 1. Thakazhi Sivasankara Pillai
 - 2. Shashi Tharoor
 - 3. Sudha Murthy
 - 4. Jeet Thayil

Question ID : 8161611362
Status : Answered
Chosen Option : 1

Q.19 Which of the following states is included in the sixth schedule of the Constitution of India?

- Ans
- 1. Nagaland
 - 2. Manipur
 - 3. Mizoram
 - 4. Arunachal Pradesh

Question ID : 8161611365
Status : Answered
Chosen Option : 2

Q.20 When is 'International Ozone Day' celebrated?

- Ans
- 1. 2 October
 - 2. 31 October
 - 3. 9 August
 - 4. 16 September

Question ID : 8161611349
Status : Answered
Chosen Option : 4

Q.21 'Nibble' in computer terminology is also called _____.

- Ans
- 1. Bit
 - 2. Half bit
 - 3. Half byte
 - 4. Byte

Question ID : 8161611345
Status : Answered
Chosen Option : 1

Q.22 Where is the tomb of Sher Shah Suri located?

- Ans
- 1. Rohtasgarh
 - 2. Sasaram
 - 3. Chausa
 - 4. Delhi

Question ID : 8161611360
Status : Not Answered
Chosen Option : --

Q.23 As of January 2020, who was the president of the BCCI?

- Ans
- 1. Ravi Shastri
 - 2. Sourav Ganguly
 - 3. Sunil Gavaskar
 - 4. Harsha Bogle

Question ID : 8161611348
Status : Answered
Chosen Option : 2

Q.24 Who among the following received the Padma Bhushan in 2019?

- Ans
- 1. Sunil Chhetri
 - 2. Bhupen Hazarika
 - 3. Mohanlal Viswanathan
 - 4. Virat Kohli

Question ID : 8161611363
Status : Answered
Chosen Option : 2

Q.25 As of January 2020, who is the managing director of YES Bank?

- Ans
- 1. Aditya Puri
 - 2. Ravneet Gill
 - 3. Arundhati Bhattacharya
 - 4. Amitabh Chaudhry

Question ID : **8161611351**
Status : **Not Answered**
Chosen Option : --

Prepp



Latest Sarkari jobs, Govt Exam alerts, Results and Vacancies

- ▶ Latest News and Notification
- ▶ Exam Paper Analysis
- ▶ Topic-wise weightage
- ▶ Previous Year Papers with Answer Key
- ▶ Preparation Strategy & Subject-wise Books

To know more [Click Here](#)



www.prepp.in