















Practice, Learn and Achieve  
Your Goal with Prepp

# SSC MTS Exam

Previous Paper

Simplifying  
Government Exams

 SSC CHSL	 IAS EXAM	 RRB NTPC	 NTSE	 CDS
 SSC CGL	 CBSE UGC NET	 IBPS PO	 NDA	
 SBI PO	 IBPS CLERK	 AFCAT	 SSC JE	 CTET
 CSIR UGC NET	 CAPF	 IBPS RRB		

[www.prepp.in](http://www.prepp.in)

Section : General English

Q.1 Select the meaning of the given idiom.

Apples and oranges.

- Ans
- 1. Different things
  - 2. Nutritious
  - 3. Fresh
  - 4. Same things

Question ID : 2390871738

Status : **Not Attempted and Marked For Review**

Chosen Option : --

Q.2 Select the word which means the same as the group of words given.

A young child just beginning to walk

- Ans
- 1. Joey
  - 2. Cub
  - 3. Kid
  - 4. Toddler

Question ID : 2390871739

Status : **Answered**

Chosen Option : 3

Q.3 Select the synonym of the given word.

Dedicate

- Ans
- 1. Denounce
  - 2. Decide
  - 3. Design
  - 4. Devote

Question ID : 2390871734

Status : **Answered**

Chosen Option : 2

**Comprehension:**

In the following passage some words have been deleted. Fill in the blanks with the help of the alternatives given. Select the most appropriate option for each blank.

Bengaluru is becoming an exciting destination for higher education for students (1)\_\_\_\_\_ all over the world. International students (2)\_\_\_\_\_ close to 20% of the student population (3)\_\_\_\_\_ the city and this number is (4)\_\_\_\_\_ increasing. The city has almost 900 colleges - the maximum in any city (5)\_\_\_\_\_ the country.

SubQuestion No : 4

Q.4 Select the most appropriate option to fill in blank No.1.

- Ans  1. from  
 2. by  
 3. for  
 4. in

Question ID : 2390871726  
Status : Answered  
Chosen Option : 1

**Comprehension:**

In the following passage some words have been deleted. Fill in the blanks with the help of the alternatives given. Select the most appropriate option for each blank.

Bengaluru is becoming an exciting destination for higher education for students (1)\_\_\_\_\_ all over the world. International students (2)\_\_\_\_\_ close to 20% of the student population (3)\_\_\_\_\_ the city and this number is (4)\_\_\_\_\_ increasing. The city has almost 900 colleges - the maximum in any city (5)\_\_\_\_\_ the country.

**SubQuestion No : 5**

**Q.5 Select the most appropriate option to fill in blank No.2.**

- Ans  1. constitute  
 2. construct  
 3. consist  
 4. collect

Question ID : 2390871727  
Status : Answered  
Chosen Option : 1

**Comprehension:**

In the following passage some words have been deleted. Fill in the blanks with the help of the alternatives given. Select the most appropriate option for each blank.

Bengaluru is becoming an exciting destination for higher education for students (1)\_\_\_\_\_ all over the world. International students (2)\_\_\_\_\_ close to 20% of the student population (3)\_\_\_\_\_ the city and this number is (4)\_\_\_\_\_ increasing. The city has almost 900 colleges - the maximum in any city (5)\_\_\_\_\_ the country.

**SubQuestion No : 6**

**Q.6 Select the most appropriate option to fill in blank No.3.**

- Ans  1. in  
 2. on  
 3. at  
 4. to

Question ID : 2390871728  
Status : Answered  
Chosen Option : 1

**Comprehension:**

In the following passage some words have been deleted. Fill in the blanks with the help of the alternatives given. Select the most appropriate option for each blank.

Bengaluru is becoming an exciting destination for higher education for students (1)\_\_\_\_\_ all over the world. International students (2)\_\_\_\_\_ close to 20% of the student population (3)\_\_\_\_\_ the city and this number is (4)\_\_\_\_\_ increasing. The city has almost 900 colleges - the maximum in any city (5)\_\_\_\_\_ the country.

**SubQuestion No : 7**

**Q.7 Select the most appropriate option to fill in blank No.4.**

- Ans  1. readily  
 2. barely  
 3. steadily

4. rarely

Question ID : 2390871729  
Status : Answered  
Chosen Option : 3

**Comprehension:**

In the following passage some words have been deleted. Fill in the blanks with the help of the alternatives given. Select the most appropriate option for each blank.

Bengaluru is becoming an exciting destination for higher education for students (1)\_\_\_\_\_ all over the world. International students (2)\_\_\_\_\_ close to 20% of the student population (3)\_\_\_\_\_ the city and this number is (4)\_\_\_\_\_ increasing. The city has almost 900 colleges - the maximum in any city (5)\_\_\_\_\_ the country.

**SubQuestion No : 8**

**Q.8 Select the most appropriate option to fill in blank No.5.**

- Ans  1. along  
 2. through  
 3. across  
 4. about

Question ID : 2390871730  
Status : Answered  
Chosen Option : 3

**Q.9 Select the correctly spelt word.**

- Ans  1. Definitely  
 2. Definatly  
 3. Definetely  
 4. Definitely

Question ID : 2390871741  
Status : Answered  
Chosen Option : 4

**Q.10 Select the meaning of the given idiom.**

**At the drop of a hat.**

- Ans  1. Immediately  
 2. Losing a hat  
 3. Completely  
 4. Facing difficulties

Question ID : 2390871737  
Status : Not Attempted and Marked For Review  
Chosen Option : --

**Q.11 Select the most appropriate word to fill in the blank.**

**The company \_\_\_\_\_ its first all electric car in the Indian market soon.**

- Ans  1. launch  
 2. launched  
 3. is launching  
 4. has launched

Question ID : 2390871732  
Status : Answered

Q.12 Select the most appropriate option to substitute the underlined segment in the given sentence. If there is no need to substitute it, select 'No substitution required'.

The government is set strict limits on public spending this year.

- Ans
- 1. has set
  - 2. have set
  - 3. No substitution required
  - 4. had been set

Question ID : 2390871722

Status : Answered

Chosen Option : 4

Q.13 Identify the segment in the sentence which contains the grammatical error from the given options.

The city of Banaras is widely known from its ghats and temples.

- Ans
- 1. The city of Banaras
  - 2. is widely known
  - 3. ghats and temples
  - 4. from its

Question ID : 2390871719

Status : Answered

Chosen Option : 4

Q.14 Select the antonym of the given word.

Fragile

- Ans
- 1. Gross
  - 2. Novel
  - 3. Tiny
  - 4. Tough

Question ID : 2390871735

Status : Not Answered

Chosen Option : --

Q.15 Select the most appropriate word to fill in the blank and make a meaningful sentence.

He \_\_\_\_\_ me up on his way to work.

- Ans
- 1. picked
  - 2. dropped
  - 3. lifted
  - 4. raised

Question ID : 2390871743

Status : Answered

Chosen Option : 2

Q.16 Identify the segment in the sentence which contains the grammatical error from the given options.

He started life as a teacher before turn to journalism.

- Ans
- 1. as a teacher
  - 2. He started life

- 3. before turn
- 4. to journalism.

Question ID : 2390871721  
Status : Answered  
Chosen Option : 2

Q.17 Identify the segment in the sentence which contains the grammatical error from the given options.

Jaipur, which is renown for its architecture, was founded about 300 years ago.

- Ans
- 1. Jaipur, which is renown
  - 2. for its architecture
  - 3. was founded
  - 4. about 300 years ago

Question ID : 2390871720  
Status : Answered  
Chosen Option : 4

Q.18 Select the most appropriate option to substitute the underlined segment in the given sentence. If there is no need to substitute it, select 'No substitution required'.

They won't commit themselves until they see which way the wind is blowing.

- Ans
- 1. their till
  - 2. them until
  - 3. themself until
  - 4. No substitution required

Question ID : 2390871723  
Status : Answered  
Chosen Option : 4

Q.19 Select the most appropriate word to fill in the blank and make a meaningful sentence.

Conservative parents usually do not give their \_\_\_\_\_ for uncommon career choices of their children.

- Ans
- 1. agreement
  - 2. consent
  - 3. allowance
  - 4. dissent

Question ID : 2390871744  
Status : Answered  
Chosen Option : 2

Q.20 Select the most appropriate option to substitute the underlined segment in the given sentence. If there is no need to substitute it, select 'No substitution required'.

The new product will be arrive on supermarket shelves early next year.

- Ans
- 1. No substitution required
  - 2. will arrive on
  - 3. will arrived on
  - 4. will arriving on

Question ID : 2390871724  
Status : Answered  
Chosen Option : 2

Q.21 Select the most appropriate word to fill in the blank.

\_\_\_\_\_ they are twins, they are worlds apart in their attitude to life.

- Ans
- 1. However
  - 2. Despite
  - 3. Whereas
  - 4. Although

Question ID : 2390871731  
Status : Answered  
Chosen Option : 4

Q.22 Select the synonym of the given word.

Awkward

- Ans
- 1. Worthy
  - 2. Likable
  - 3. Scared
  - 4. Clumsy

Question ID : 2390871733  
Status : Answered  
Chosen Option : 3

Q.23 Select the antonym of the given word.

Persuade

- Ans
- 1. Endorse
  - 2. Dissuade
  - 3. Convince
  - 4. Fume

Question ID : 2390871736  
Status : Not Answered  
Chosen Option : --

Q.24 Select the word which means the same as the group of words given.

Resistant to a particular infection

- Ans
- 1. innocent
  - 2. Immune
  - 3. Immortal
  - 4. Innocuous

Question ID : 2390871740  
Status : Answered  
Chosen Option : 2

Q.25 Select the correctly spelt word.

- Ans
- 1. Independent
  - 2. Independant
  - 3. Independnt
  - 4. Independent

Question ID : 2390871742  
Status : Answered

## Section : General Intelligence &amp; Reasoning

Q.1 In a certain code language, 'WINDOW' is written as 'TLAKFT'. What is the code for 'BLADES' in that code language?

- Ans
- 1. QCBYJZ
  - 2. PBBXIY
  - 3. PBAXIY
  - 4. QBBYJZ





Question ID : 2390871544

Status : Not Attempted and Marked For Review

Chosen Option : --

Q.2 Identify the Venn diagram that best represents the relationship between the given classes.

Producer, Director, Actor

- Ans
- 1. 
  - 2. 
  - 3. 
  - 4. 

Question ID : 2390871564

Status : Answered

Chosen Option : 2

Q.3 Select the letter-pair that can replace the question mark (?) in the following series.

RD, XJ, DP, JV, ?

- Ans
- 1. PC
  - 2. QB
  - 3. QC
  - 4. PB

Question ID : 2390871540

Status : Answered

Chosen Option : 4

Q.4 Select the number that can replace the question mark (?) in the following series.

600, 120, 30, 10, 5, ?

- Ans
- 1. 3
  - 2. 4
  - 3. 2



✓ 4.5

Question ID : 2390871554

Status : Answered

Chosen Option : 4

**Q.5** In the following question below are given some statements followed by some conclusions based on those statements. Taking the given statements to be true even if they seem to be at variance from commonly known facts. Read all the conclusions and then decide which of the given conclusion logically follows the given statements.

**Statements:**

- I. All L are B.
- II. No T is L.
- III. Some R are T.

**Conclusions:**

- I. Some T are R.
- II. No B is T.
- III. No L is T.

- Ans**
- ✓ 1. Both conclusion I and III follows.
  - ✗ 2. Only conclusion II follows.
  - ✗ 3. Both conclusion II and III follows.
  - ✗ 4. Only conclusion I follows.

Question ID : 2390871551

Status : Answered

Chosen Option : 1

**Q.6** If a mirror is placed on the line AB, then which of the answer figures is the right image of the given figure?



**Ans**

- ✗ 1.
- ✗ 2.
- ✓ 3.
- ✗ 4.

Question ID : 2390871562

Status : Answered

Chosen Option : 3

**Q.7** In a certain code language, 'PAL' is written as '29', 'CAR' is written as '22'. What is the code for 'ZON' in that code

- Ans
- 1. 51
  - 2. 43
  - 3. 45
  - 4. 55

Question ID : 2390871546  
Status : Answered  
Chosen Option : 4

Q.8 Five toys A, B, C, D and E are kept one above the other (not necessarily in the same order). A is four places above C. D is between B and E. E is three places below A. Three of the given four options follows a same logic based on their arrangement. Which of the following does not follow that logic?

- Ans
- 1. AC
  - 2. DE
  - 3. EC
  - 4. BD

Question ID : 2390871550  
Status : Answered  
Chosen Option : 1

Q.9 In the following question, select the missing number from the given series.

17, 31, 47, 65, ?

- Ans
- 1. 85
  - 2. 83
  - 3. 89
  - 4. 87

Question ID : 2390871553  
Status : Answered  
Chosen Option : 1

Q.10 By interchanging the given two signs which of the following equation will be incorrect?

÷ and +

- Ans
- 1.  $12 \div 9 \times 31 + 3 = 105$
  - 2.  $6 \times 11 + 2 \div 5 = 38$
  - 3.  $9 \div 11 + 11 \times 2 = 9$
  - 4.  $7 \times 16 + 4 \div 5 = 33$

Question ID : 2390871557  
Status : Answered  
Chosen Option : 3

Q.11 In a certain code language, 'ROAM' is written as '44', 'HIMP' is written as '43'. What is the code for 'BONE' in that code language?

- Ans
- 1. 34
  - 2. 36
  - 3. 39
  - 4. 33

Question ID : 2390871547  
Status : Answered  
Chosen Option : 4

Q.12 After interchanging which two numbers, the value of given equation will be '4'?

$$6 + 3 \div 9 \times 7 - 5$$

- Ans
- 1. 9 and 5
  - 2. 3 and 5
  - 3. 7 and 6
  - 4. 5 and 6

Question ID : 2390871558

Status : Answered

Chosen Option : 3

Q.13 Six buses B1, B2, B3, B4, B5 and B6 are parked around a circular path (not necessarily in the same order). B3 is third to the right of B6. B4 is to the immediate left of B1. B2 is second to the left of B6.

How many buses are between B5 and B1?

- Ans
- 1. 1
  - 2. 2
  - 3. 0
  - 4. 3

Question ID : 2390871548

Status : Answered

Chosen Option : 2

Q.14 In the following question below are given some statements followed by some conclusions based on those statements. Taking the given statements to be true even if they seem to be at variance from commonly known facts. Read all the conclusions and then decide which of the given conclusion logically follows the given statements.

Statements:

- I. Some pen are sharpener.
- II. All pen are pencil.

Conclusions:

- I. Some pencil are pen.
- II. All sharpener are pen .

- Ans
- 1. Only conclusion II follows.
  - 2. Only conclusion I follows.
  - 3. Both conclusion I and II follows.
  - 4. Neither conclusion follow.

Question ID : 2390871552

Status : Answered

Chosen Option : 2

Q.15 In a certain code language, 'PENCIL' is written as 'RIPGKP'. What is the code for 'FABRIC' in that code language?

- Ans
- 1. HFDVKG
  - 2. HEDVKG
  - 3. IEFWLH
  - 4. IFEWLH

Question ID : 2390871545

Status : Answered

Chosen Option : 2

Q.16 Five chairs J, H, P, S and M are placed in a row facing towards east (Not necessarily in the same order). P is second to the left of S. J is second to the right of H. M is to the immediate right of S.

Which of the following

- Ans
- 1. To the immediate right of S
  - 2. Third to the left of M
  - 3. Second to the right of H
  - 4. Exactly between S and H

Question ID : 2390871549  
Status : Answered  
Chosen Option : 3

Q.17 Select the option that is related to the third term in the same way as the second term is related to the first term.

Film : Producer :: Poem : ?

- Ans
- 1. Director
  - 2. Actor
  - 3. Cobbler
  - 4. Poet

Question ID : 2390871542  
Status : Answered  
Chosen Option : 4

Q.18 Select the option that is related to the third Letter Cluster in the same way as the second Letter Cluster is related to the first Letter Cluster.

ROAD : TREI :: MINT : ?

- Ans
- 1. PMSZ
  - 2. OLRV
  - 3. OMRV
  - 4. PNSZ

Question ID : 2390871543  
Status : Answered  
Chosen Option : 2

Q.19 Select the option that is related to the third number in the same way as the second number is related to the first number.

596 : 965 :: 824 : ?

- Ans
- 1. 418
  - 2. 408
  - 3. 248
  - 4. 258

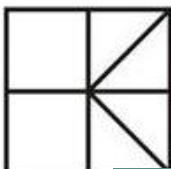
Question ID : 2390871555  
Status : Answered  
Chosen Option : 3

Q.20 From the given answer figures, select the one in which the question figure is hidden/embedded.



Ans

1.




✓ 2.



✗ 3.



✗ 4.

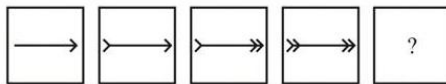


Question ID : 2390871561

Status : Answered


Chosen Option : 2

Q.21 In the following question, select the figure which can be placed at the sign of question mark (?) from the given alternatives.

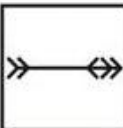


Ans

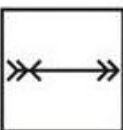
✓ 1.




✗ 2.



✗ 3.



✗ 4.



Question ID : 2390871559

Status : Answered

Chosen Option : 1

Q.22 Select the option that is related to the third term in the same way as the second term is related to the first term.

Jute : Sack :: Wood : ?

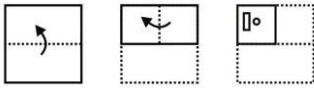
Ans ✗ 1. Hard

✓ 2. Furniture

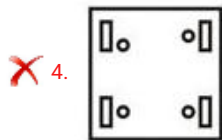
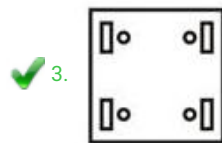
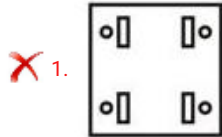
✗ 3. Brown

✗ 4. Plastic

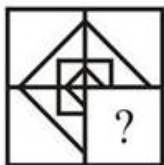
**Q.23** A piece of paper is folded and punched as shown below in the question figures, indicate how it will appear when opened?



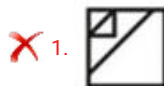
Ans



**Q.24** Which answer figure will complete the pattern in the question figure?



Ans



**Q.25** In the following question

mark (?) from the given alternatives.

5 9 6 3 9  
3 1 1 7 2 6  
8 5 4 ?

- Ans
- 1. 48
  - 2. 36
  - 3. 34
  - 4. 44

Question ID : 2390871556  
Status : Answered  
Chosen Option : 2

Section : Numerical Aptitude

Q.1 Raman and Sanjay started a business by investing ₹63000 and ₹42000 respectively. If the total profit at the end of year is ₹9000, then what is the share of Raman?

- Ans
- 1. ₹5400
  - 2. ₹4500
  - 3. ₹3600
  - 4. ₹4200

Question ID : 2390871401  
Status : Answered  
Chosen Option : 1

Q.2 A train starts from A at 6 AM and reaches B at 11 AM on the same day. Another train starts from B at 8 AM and reaches A at 3 PM on the same day. At what time the two trains will have crossed each other?

- Ans
- 1. 7:45 AM
  - 2. 10:30 AM
  - 3. 8:45 AM
  - 4. 9:45 AM

Question ID : 2390871407  
Status : Not Attempted and Marked For Review  
Chosen Option : --

Q.3 A man goes from C to D at 40 km/h and he returns from D to C at x km/h. If the average speed of the man for the whole journey is 60 km/h, then what is the value of x?

- Ans
- 1. 100
  - 2. 120
  - 3. 80
  - 4. 110

Question ID : 2390871408  
Status : Answered  
Chosen Option : 2

Q.4 A sum of ₹1200 is invested at compound interest (compounded half yearly). If the rate of interest is 10% per annum, then what will be the amount after 18 months?

- Ans
- 1. ₹1295.35
  - 2. ₹1563.25
  - 3. ₹1185.45
  - 4. ₹1389.15

Question ID : 2390871404

Status : **Not Attempted and Marked For Review**

Chosen Option : --

**Q.5** The length of one of the diagonals of a rhombus is 48 cm. If the side of the rhombus is 26 cm, then what is the area of the rhombus?

- Ans**
- 1. 420 cm<sup>2</sup>
  - 2. 360 cm<sup>2</sup>
  - 3. 480 cm<sup>2</sup>
  - 4. 540 cm<sup>2</sup>

Question ID : 2390871411

Status : **Answered**

Chosen Option : 3

**Q.6** The marked price of an article is ₹3040. If the discount offered on this article is 20%, then what will be the selling price?

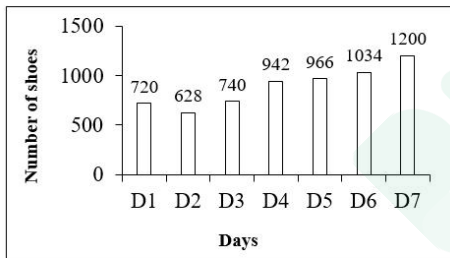
- Ans**
- 1. ₹3132
  - 2. ₹2412
  - 3. ₹2432
  - 4. ₹3262

Question ID : 2390871395

Status : **Answered**

Chosen Option : 3

**Q.7** The Bar graph given below presents the number of shoes manufactured by a company on the different days of a week.



The number of shoes manufactured on D1 is what percentage of shoes manufactured on D7?

- Ans**
- 1. 70.25
  - 2. 80.45
  - 3. 80
  - 4. 60

Question ID : 2390871413

Status : **Answered**

Chosen Option : 4

**Q.8** If A is the smallest three digit number divisible by both 6 and 7 and B is the largest four digit number divisible by both 6 and 7, then what is the value of B - A?

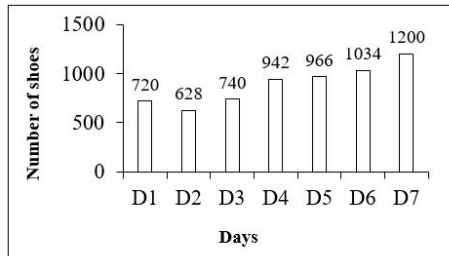
- Ans**
- 1. 9870
  - 2. 9912
  - 3. 9996
  - 4. 9954

Question ID : 2390871390

Status : **Not Attempted and Marked For Review**



**Q.9** The Bar graph given below presents the number of shoes manufactured by a company on the different days of a week.



The number of shoes manufactured on D5 is how much more than the average number of shoes manufactured per day?

- Ans**
- 1. 76
  - 2. 72
  - 3. 68
  - 4. 64

Question ID : 2390871414

Status : Answered

Chosen Option : 1

**Q.10** What is the value of:

$$2 \text{ of } 3 \div 3 \times 2 + \{4 \times 3 - (5 \times 2 + 3)\}?$$

- Ans**
- 1. 6
  - 2. -21
  - 3. 3
  - 4. -24

Question ID : 2390871391

Status : Answered

Chosen Option : 3

**Q.11** Rahul's salary is 40% less than Rakesh's salary. Deepak's salary is 80% more than Rahul's salary. If Deepak's salary is ₹34560, then what is the salary of Rakesh?

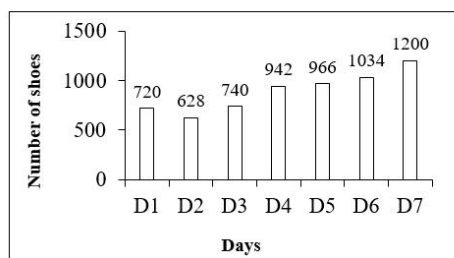
- Ans**
- 1. ₹28000
  - 2. ₹24000
  - 3. ₹32000
  - 4. ₹26000

Question ID : 2390871397

Status : Answered

Chosen Option : 3

**Q.12** The Bar graph given below presents the number of shoes manufactured by a company on the different days of a week.



What is the total number of shoes manufactured by the company on all seven days together?

- Ans**
- 1. 6230

- 2. 6130
- 3. 6030
- 4. 5930

Question ID : 2390871412  
Status : Answered  
Chosen Option : 1

Q.13 The edge of a cube is 8 cm. What is the total surface area of the cube?

- Ans
- 1.  $256 \text{ cm}^2$
  - 2.  $484 \text{ cm}^2$
  - 3.  $384 \text{ cm}^2$
  - 4.  $128 \text{ cm}^2$

Question ID : 2390871409  
Status : Answered  
Chosen Option : 3

Q.14 What is the value of:

$$(9 \div 30)^2 \times 2.4 + 0.3 \text{ of } 12 \times (1 - 0.3)^2 + 9 \times (0.3)^2 ?$$

- Ans
- 1. 3.43
  - 2. 3.69
  - 3. 2.17
  - 4. 2.79

Question ID : 2390871392  
Status : Answered  
Chosen Option : 4

Q.15 The ratio of the age of a father and his son is 3 : 1. If the product of their ages is 432, then what is the sum of their ages?

- Ans
- 1. 48 years
  - 2. 54 years
  - 3. 60 years
  - 4. 36 years

Question ID : 2390871400  
Status : Answered  
Chosen Option : 1

Q.16 A sum of ₹10000 is invested in three schemes of simple interest. The annual interest rates are respectively, 4%, 6% and 10%. ₹4000 were invested in the first scheme. If the total interest earned after five years is ₹2800, then how much money was invested in the third scheme?

- Ans
- 1. ₹1000
  - 2. ₹5000
  - 3. ₹1500
  - 4. ₹3000

Question ID : 2390871403  
Status : Answered  
Chosen Option : 1

Q.17

N and K together can complete a work in 240 days, K and G together can complete the same work in 72 days and N and G together can complete the same work in 80 days. In how many days K alone can complete the same work?

- Ans
- 1. 360 days
  - 2. 240 days
  - 3. 280 days
  - 4. 180 days

Question ID : 2390871405  
Status : Answered  
Chosen Option : 1

Q.18 The present age of a Manoj is twice the sum of the ages of his two children. After 20 years, the age of Manoj will become equal to the sum of the ages of his two children. What is the present age of Manoj?

- Ans
- 1. 30 years
  - 2. 40 years
  - 3. 36 years
  - 4. 35 years

Question ID : 2390871402  
Status : Answered  
Chosen Option : 2

Q.19 What is the average of first 15 odd numbers among the natural numbers?

- Ans
- 1. 15
  - 2. 16
  - 3. 17
  - 4. 18

Question ID : 2390871393  
Status : Answered  
Chosen Option : 1

Q.20 The profit earned on selling an article at ₹720 is half of the loss incurred on selling the same article at ₹360. What is the cost price of the article?

- Ans
- 1. ₹420
  - 2. ₹480
  - 3. ₹540
  - 4. ₹600

Question ID : 2390871399  
Status : Answered  
Chosen Option : 4

Q.21 The average of four numbers is 20. If the average of the first two numbers is 15, then what is the average of the last two numbers?

- Ans
- 1. 18
  - 2. 25
  - 3. 22
  - 4. 20

Question ID : 2390871394  
Status : Answered  
Chosen Option : 2

Q.22 The ratio of the selling price to the cost price in a transaction is 4 : 5. If the selling price is ₹80, then how much is the loss?

- Ans
- 1. ₹16
  - 2. ₹30
  - 3. ₹15
  - 4. ₹20

Question ID : 2390871398  
Status : Answered  
Chosen Option : 4

Q.23 Vijay alone can complete a work in 50 days. How much part of the work will be completed in ten days?

- Ans
- 1.  $\frac{1}{5}$
  - 2.  $\frac{1}{10}$
  - 3.  $\frac{1}{3}$
  - 4.  $\frac{1}{4}$

Question ID : 2390871406  
Status : Answered  
Chosen Option : 1

Q.24 What is the circumference of the largest circle which can be inscribed in a square of side 14 cm?

(Take  $\pi = \frac{22}{7}$ )

- Ans
- 1. 88 cm
  - 2. 22 cm
  - 3. 44 cm
  - 4. 66 cm

Question ID : 2390871410  
Status : Answered  
Chosen Option : 3

Q.25 What is the median of the given data?

41, 43, 46, 50, 85, 61, 76, 55, 68, 95

- Ans
- 1. 61
  - 2. 57
  - 3. 58
  - 4. 55

Question ID : 2390871396  
Status : Answered  
Chosen Option : 3

Section : General awareness

Q.1 National Youth Festival is celebrated on the birth anniversary of which of the following personalities?

- Ans
- 1. Bhagat Singh
  - 2. Milkha Singh
  - 3. Swami Vivekanand

4. Chandrashekhar Azad

Question ID : 2390871171  
Status : Answered  
Chosen Option : 3

Q.2 Which of the following Jyotirlingas is in Maharashtra?

- Ans  1. Grishneshwar  
 2. Malikarjuna  
 3. Mahakaleshwar  
 4. Baidyanath

Question ID : 2390871165  
Status : Not Answered  
Chosen Option : --

Q.3 India's foreign reserves does NOT consist of which of the following?

- Ans  1. Gold  
 2. Carbon Bonds  
 3. Special Drawing Rights (SDR)  
 4. Reserve Tranche Position (RTP)

Question ID : 2390871173  
Status : Not Answered  
Chosen Option : --

Q.4 Botanical Survey of India (BSI) Headquarter is located in which city?

- Ans  1. Kolkata  
 2. Bhopal  
 3. Assam  
 4. New Delhi

Question ID : 2390871180  
Status : Not Attempted and Marked For Review  
Chosen Option : --

Q.5 GST is NOT applicable on which of the following goods or services?

- Ans  1. Alcohol  
 2. Salon services  
 3. Automobiles  
 4. Restaurant services

Question ID : 2390871175  
Status : Answered  
Chosen Option : 2

Q.6 National waterway No.2 is located on which river?

- Ans  1. Mahanadi  
 2. Ganga  
 3. Brahmaputra  
 4. Cauvery

Question ID : 2390871184

Status : **Not Answered**  
Chosen Option : --

Q.7 Asian Infrastructure Investment Bank headquarter is located in which city?

- Ans
- 1. Philippines
  - 2. Gurugram
  - 3. Beijing
  - 4. Shanghai

Question ID : **2390871174**  
Status : **Not Answered**  
Chosen Option : --

Q.8 Which of the following is NOT a feature of Eukaryotic cell?

- Ans
- 1. Nuclear membrane present
  - 2. Mitochondria present
  - 3. Nucleus well organized
  - 4. Chloroplast absent in plant cells

Question ID : **2390871183**  
Status : **Answered**  
Chosen Option : 4

Q.9 Minamata Convention is signed to tackle the issue of:

- Ans
- 1. CFC and HFC
  - 2. Nuclear radiations
  - 3. Mercury
  - 4. Ozone gas

Question ID : **2390871179**  
Status : **Not Attempted and Marked For Review**  
Chosen Option : --

Q.10 The Sixth Schedule of the Indian Constitution does NOT exercise its control to the tribal areas of which of the following state?

- Ans
- 1. Assam
  - 2. Manipur
  - 3. Meghalaya
  - 4. Tripura

Question ID : **2390871178**  
Status : **Not Answered**  
Chosen Option : --

Q.11 Which of the following sportspersons has received the 'Rajiv Gandhi Khel Ratna' Award?

- Ans
- 1. Saina Nehwal
  - 2. Gita Phogat
  - 3. Deepika Kumari
  - 4. Kapil Dev

Question ID : **2390871168**  
Status : **Not Attempted and Marked For Review**

Q.12 "Healthy States, Progressive India" Report has been published by which of the following institution?

- Ans
- 1. World Health Organization (WHO)
  - 2. Ministry of Health and Family Welfare
  - 3. Niti Aayog
  - 4. United Nations

Question ID : 2390871170  
Status : Answered  
Chosen Option : 3

Q.13 Inter-State Council was set up by the recommendation of which committee?

- Ans
- 1. TSR Subramanyam committee
  - 2. Sarkaria committee
  - 3. Y V Reddy Committee
  - 4. Chandrababu Naidu committee

Question ID : 2390871177  
Status : Not Answered  
Chosen Option : --

Q.14 Who was the first women Chief Minister of an Indian state?

- Ans
- 1. Sucheta Kriplani
  - 2. Mamta Banerjee
  - 3. Indira Gandhi
  - 4. Sarojini Naidu

Question ID : 2390871172  
Status : Answered  
Chosen Option : 1

Q.15 "Neel Darpan" was written by Dinbandhu Mitra to portray the oppression faced by peasants to grow indigo in:

- Ans
- 1. Assam
  - 2. Bengal
  - 3. Gujarat
  - 4. Madras

Question ID : 2390871189  
Status : Not Answered  
Chosen Option : --

Q.16 Deepika Kumari is associated with which Sport?

- Ans
- 1. Archery
  - 2. Swimming
  - 3. Badminton
  - 4. Squash

Question ID : 2390871169  
Status : Answered  
Chosen Option : 1

Q.17 The World famous Borobudur Temple is situated in:

Ans

- 1. Japan
- 2. Cambodia
- 3. Vietnam
- 4. Indonesia

Question ID : 2390871167  
Status : Not Answered  
Chosen Option : --

Q.18 1 pound = \_\_\_\_ ounces

- Ans
- 1. 20
  - 2. 12
  - 3. 18
  - 4. 16

Question ID : 2390871182  
Status : Not Answered  
Chosen Option : --

Q.19 The ratio of the length to the height (width) of the national Flag shall be?

- Ans
- 1. 4 : 1
  - 2. 3 : 2
  - 3. 4 : 2
  - 4. 3 : 1

Question ID : 2390871166  
Status : Answered  
Chosen Option : 1

Q.20 According to Census 2011, which of the following states has the highest density of population in India?

- Ans
- 1. West Bengal
  - 2. Uttar Pradesh
  - 3. Maharashtra
  - 4. Bihar

Question ID : 2390871186  
Status : Answered  
Chosen Option : 2

Q.21 Who among the following takes part in election of the President of India?

- Ans
- 1. Elected Members of both the houses of Parliament and Legislative Assemblies of the states.
  - 2. Elected and nominated members of both the houses of Parliament.
  - 3. Elected and nominated members of both the houses of Parliament and Legislative Assemblies of the states.
  - 4. Elected members of both the houses of Parliament only.

Question ID : 2390871176  
Status : Answered  
Chosen Option : 4

Q.22 What is Cryptogamae?

- Ans
- 1. Plants having uncovered seeds



- 2. Plants having covered seeds
- 3. Non-flowering plants
- 4. Flowering plants

Question ID : 2390871181  
Status : Answered  
Chosen Option : 4

**Q.23 Mawsynram is located on which hills of Meghalaya?**

- Ans
- 1. Khasi
  - 2. Jaintia
  - 3. Garo
  - 4. Diphu

Question ID : 2390871185  
Status : Not Answered  
Chosen Option : --

**Q.24 Which of the following Indian rulers was defeated by Mahmud Ghazni in his first attack in the year 1000 AD?**

- Ans
- 1. Jaya Pala
  - 2. Sukh Pala
  - 3. Chandra Pala
  - 4. Anand Pala

Question ID : 2390871188  
Status : Not Answered  
Chosen Option : --

**Q.25 Who was the organizer of revolt of 1857 in Bihar?**

- Ans
- 1. Maulvi Ahmadullah
  - 2. Nana Sahib
  - 3. Kunwar Singh
  - 4. Bahadur Shah

Question ID : 2390871187  
Status : Not Answered  
Chosen Option : --



# Latest Sarkari jobs, Govt Exam alerts, Results and Vacancies

- ▶ Latest News and Notification
- ▶ Exam Paper Analysis
- ▶ Topic-wise weightage
- ▶ Previous Year Papers with Answer Key
- ▶ Preparation Strategy & Subject-wise Books

To know more [Click Here](#)



[www.prepp.in](http://www.prepp.in)