

**ENGLISH & QUANTITATIVE REASONING**

**Directions** (Q. Nos. 181-183) Choose the word which best expresses the meaning of the underlined word in the sentence

181. Decay is an immutable factor of human life.

- (a) important
- (b) unique
- (c) unchangeable
- (d) awful

**Answer: (c)**

182. It was an ignominious defeat for the team.

- (a) shameful
- (b) admirable
- (c) unaccountable
- (d) worthy

**Answer: (a)**

183. His conjecture was better than mine.

- (a) guess
- (b) fact
- (c) surprise
- (d) doubt

**Answer: (a)**

**Directions** (Q. Nos. 184-186) Fill in the blank.

184. Freedom and equality are the.....rights of every human.

- (a) inalienable
- (b) inscrutable
- (c) incalculable
- (d) incredible

**Answer: (d)**

185. Pradeep's face spoke .....for the happiness he was feeling.

- (a) elegantly
- (b) tons

(c) volumes

(d) much

**Answer: (c)**

186. His speech was disappointing : it ..... all the major issues.

(a) projected

(b) revealed

(c) skirted

(d) analyzed

**Answer: (c)**

**Directions** (Q. Nos. 187-189) Choose the word which is closest to the opposite in meaning of the following sentence.

187. Hydra is biologically believed to be

(a) undying

(b) perishable

(c) ancient

(d) eternal

**Answer: (b)**

188. The Gupta rulers **advocated** all cultural activities and thus Gupta period was called the golden era in Indian History.

(a) fostered

(b) enriched

(c) opposed

(d) spurned

**Answer: (c)**

189. This is a **barbarous**

(a) bad

(b) good

- (c) civilised
- (d) exemplary

**Answer: (c)**

190. Though **novice** in art shows great promise.

- (a) tyro
- (b) inexperienced
- (c) veteran
- (d) green horn

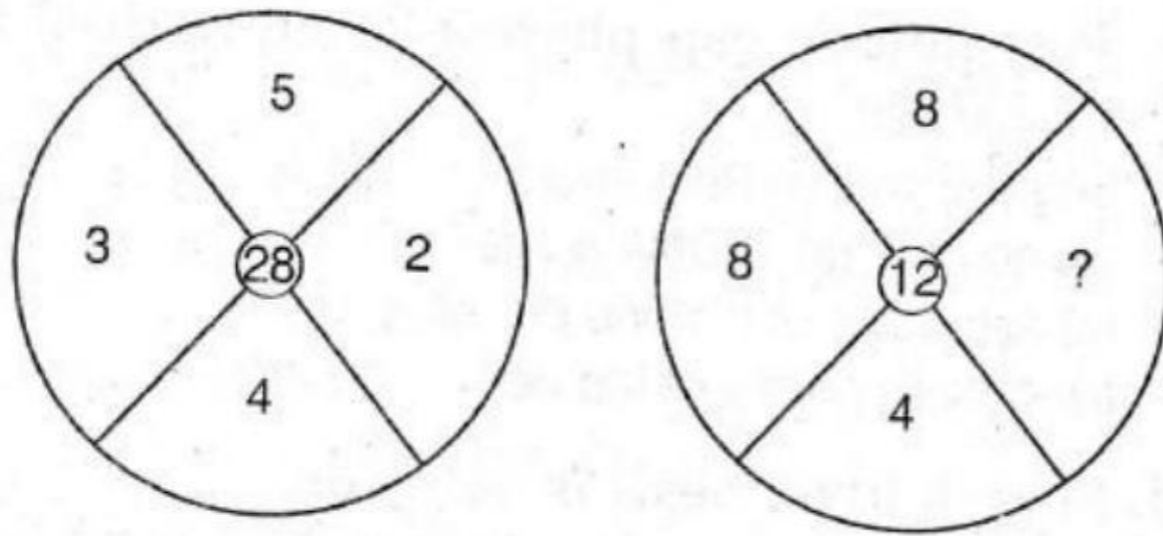
**Answer: (c)**

191. If 15th August 2011 was Tuesday, then what day of the week was it on 17th September, 2011?

- (a) Thursday
- (b) Friday
- (c) Saturday
- (d) Sunday

**Answer: (d)**

192. In the following question five figures are given. Out of them, find the three figures that can be joined to form a square.



- (a) 1
- (b) 2
- (c) 4
- (d) 5

**Answer: (a)**

193. In a certain code language, 'DOME' is written as '8943' and 'MEAL' is written as '4321'. What group of letters can be formed for the code '38249'?

- (a) EOADM
- (b) MEDOA
- (c) EDAMO
- (d) EMDAO

**Answer: (d)**

194. Replace the question mark (?) in the series given below with the correct option.

4, 5, 7, 11, 19, 35, ?

- (a) 67
- (b) 76
- (c) 55
- (d) 45



**Answer: (b)**

195. Complete the series by replacing '?' mark.

G4T, J9R, M20P, P43N, S90L, ?

- (a) S90L
- (b) V185J
- (c) M20P
- (d) P43N

**Answer: (d)**

196. Neeraj starts walking towards South. After walking 15 m, he turns towards North. After walking 20 m, he turn towards East and walks 10 m. He then turns towards South and walks 5 m. How far is he from his original position and in which direction?

- (a) 10 m, East
- (b) 10 m, South-East
- (c) 10 m, West
- (d) 10 m, North-East

**Answer: (b)**

197. Shikha is mother-in-law of Ekta who is sister-in-law of Ankit. Pankaj is father of Sanjay, the only brother of Ankit. How is Shikha related to Ankit?

- (a) Mother-in-law
- (b) Aunt
- (c) Wife
- (d) Mother

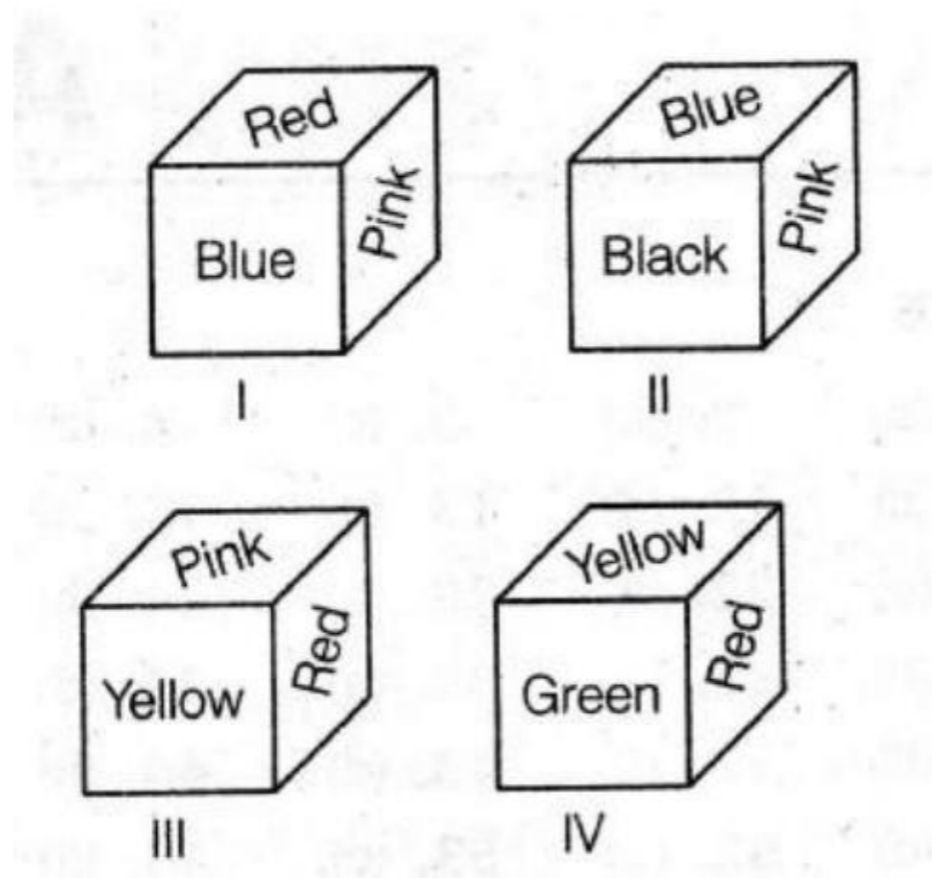
**Answer: (c)**

198. In a row of forty children, P is thirteenth from the left end and Q is ninth from the right end. How many children are there between P and R, if R is fourth to the left of Q?

- (a) 12
- (b) 13
- (c) 14
- (d) 15

**Answer: (a)**

199. From the given four positions of a single dice, find the colour at the face opposite to the face having red colour.

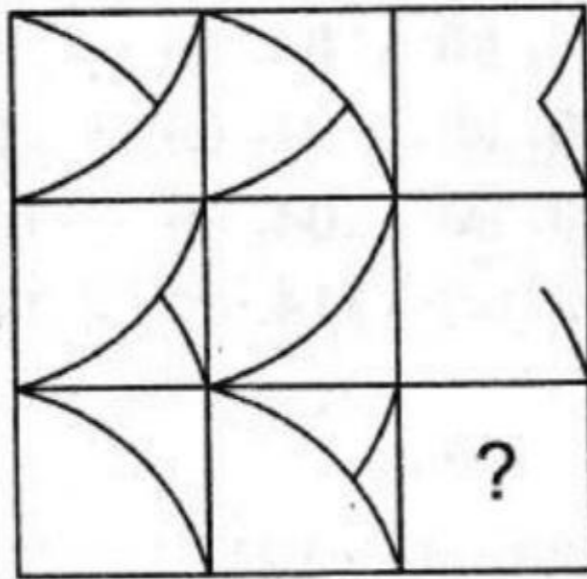


- (a) Yellow
- (b) Pink
- (c) Green
- (d) Black

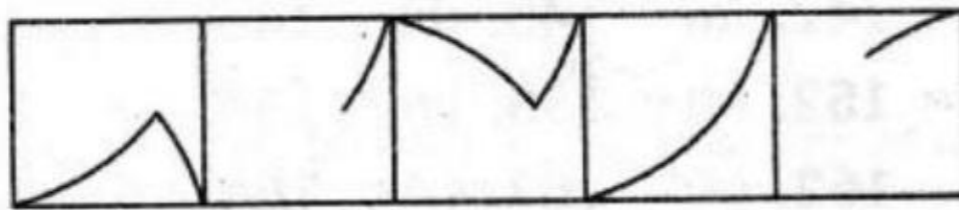
**Answer: (a)**

200. Choose the answer figure which completes the problem figure matrix.

**Problem Figure**



**Answer Figures**



(a) (b) (c) (d) (e)

**Answer: (c)**