



Practice, Learn and Achieve  
Your Goal with Prepp

# SSC MTS Exam

Previous Paper

Simplifying  
Government Exams

 SSC CHSL	 IAS EXAM	 RRB NTPC	 NTSE	 CDS
 SSC CGL	 CBSE UGC NET	 IBPS PO	 NDA	
 SBI PO	 IBPS CLERK	 AFCAT	 SSC JE	 CTET
 CSIR UGC NET	 CAPF	 IBPS RRB		

[www.prepp.in](http://www.prepp.in)

Section : General English

Q.1 Select the most appropriate word to fill in the blank and make a meaningful sentence.

His old car \_\_\_\_\_ on the highway.

- Ans
- 1. broke down
  - 2. broke out
  - 3. broke in
  - 4. broke up

Question ID : 2390871796  
Status : Answered  
Chosen Option : 1

Q.2 Select the most appropriate option to fill in the blank and make a grammatically correct sentence.

The driver of the car probably holds the key to \_\_\_\_\_ the crime.

- Ans
- 1. solved
  - 2. solving
  - 3. solution
  - 4. solves

Question ID : 2390871784  
Status : Answered  
Chosen Option : 2

Q.3 Select the most appropriate option to fill in the blank and make a grammatically correct sentence.

You are sure to \_\_\_\_\_ if you don't keep to the path.

- Ans
- 1. get lost
  - 2. got lose
  - 3. get lose
  - 4. got lost

Question ID : 2390871783  
Status : Answered  
Chosen Option : 3

Q.4 Select the most appropriate option to substitute the underlined segment in the given sentence. If there is no need to substitute it, select 'No substitution required'.

For the past six months, she is searching for a job.

- Ans
- 1. has been searching
  - 2. had been searching
  - 3. has searching
  - 4. No substitution required

Question ID : 2390871776  
Status : Answered  
Chosen Option : 1

Q.5 Select the correctly spelt word.

- Ans
- 1. Lubrisent
  - 2. Lubricant
  - 3. Lubrecant
  - 4. Lubricent

Question ID : 2390871793  
Status : Answered  
Chosen Option : 2

Q.6 Select the meaning of the given idiom.

All and sundry

- Ans
- 1. All eager
  - 2. By all means
  - 3. All included
  - 4. All in agreement

Question ID : 2390871790  
Status : Answered  
Chosen Option : 3

Q.7 Select the synonym of the given word.

Remember

- Ans
- 1. Review
  - 2. Retell
  - 3. Reign
  - 4. Recall

Question ID : 2390871786  
Status : Answered  
Chosen Option : 4

Q.8 Select the meaning of the given idiom.

Chip off the old block

- Ans
- 1. Having interest in antique furniture
  - 2. Looking after parents
  - 3. Resembling p

**X** 4. Having old fashioned values

Question ID : 2390871789

Status : **Answered**

Chosen Option : 4

**Comprehension:**

In the following passage some words have been deleted. Fill in the blanks with the help of the alternatives given. Select the most appropriate option for each blank.

It was when she started reading books as a child that Dervla Murphy, Ireland's foremost travel-writer, first developed (1)\_\_\_\_\_ interest in and love for travel. Her father was the county librarian in Waterford, and Dervla had (2)\_\_\_\_\_ to a wide variety of books which (3)\_\_\_\_\_ her imagination for distant lands and her determination (4)\_\_\_\_\_ see them for herself. Even as a child she would cycle widely in her native Waterford, and as a young adult she (5)\_\_\_\_\_ cycling trips to Europe whenever possible.

**SubQuestion No : 9**

**Q.9 Select the most appropriate option to fill in blank No.1.**

- Ans  1. an  
 2. the  
 3. one  
 4. a

Question ID : 2390871778

Status : **Answered**

Chosen Option : 2

**Comprehension:**

In the following passage some words have been deleted. Fill in the blanks with the help of the alternatives given. Select the most appropriate option for each blank.

It was when she started reading books as a child that Dervla Murphy, Ireland's foremost travel-writer, first developed (1)\_\_\_\_\_ interest in and love for travel. Her father was the county librarian in Waterford, and Dervla had (2)\_\_\_\_\_ to a wide variety of books which (3)\_\_\_\_\_ her imagination for distant lands and her determination (4)\_\_\_\_\_ see them for herself. Even as a child she would cycle widely in her native Waterford, and as a young adult she (5)\_\_\_\_\_ cycling trips to Europe whenever possible.

**SubQuestion No : 10**

**Q.10 Select the most appropriate option to fill in blank No.2.**

- Ans  1. access  
 2. assess  
 3. ascent  
 4. assent

Question ID : 2390871779

Status : **Answered**

Chosen Option : 1

**Comprehension:**

In the following passage some words have been deleted. Fill in the blanks with the help of the alternatives given. Select the most appropriate option for each blank.

It was when she started reading books as a child that Dervla Murphy, Ireland's foremost travel-writer, first developed (1)\_\_\_\_\_ interest in and love for travel. Her father was the county librarian in Waterford, and Dervla had (2)\_\_\_\_\_ to a wide variety of books which (3)\_\_\_\_\_ her imagination for distant lands and her determination (4)\_\_\_\_\_ see them for herself. Even as a child she would cycle widely in her native Waterford, and as a young adult she (5)\_\_\_\_\_ cycling trips to Europe whenever possible.

**SubQuestion No : 11**

**Q.11 Select the most appropriate option to fill in blank No.3.**

- Ans
- 1. grew
  - 2. raised
  - 3. blew
  - 4. fired

Question ID : **2390871780**

Status : **Answered**

Chosen Option : **1**

**Comprehension:**

In the following passage some words have been deleted. Fill in the blanks with the help of the alternatives given. Select the most appropriate option for each blank.

It was when she started reading books as a child that Dervla Murphy, Ireland's foremost travel-writer, first developed (1)\_\_\_\_\_ interest in and love for travel. Her father was the county librarian in Waterford, and Dervla had (2)\_\_\_\_\_ to a wide variety of books which (3)\_\_\_\_\_ her imagination for distant lands and her determination (4)\_\_\_\_\_ see them for herself. Even as a child she would cycle widely in her native Waterford, and as a young adult she (5)\_\_\_\_\_ cycling trips to Europe whenever possible.

**SubQuestion No : 12**

**Q.12 Select the most appropriate option to fill in blank No.4.**

- Ans
- 1. for
  - 2. at
  - 3. of
  - 4. to

Question ID : **2390871781**

Status : **Answered**

Chosen Option : **4**

**Comprehension:**

In the following passage some words have been deleted. Fill in the blanks with the help of the alternatives given. Select the most appropriate option for each blank.

It was when she started reading books as a child that Dervla Murphy, Ireland's foremost travel-writer, first developed (1)\_\_\_\_\_ interest in and love for travel. Her father was the county librarian in Waterford, and Dervla had (2)\_\_\_\_\_ to a wide variety of books which (3)\_\_\_\_\_ her imagination for distant lands and her determination (4)\_\_\_\_\_ see them for herself. Even as a child she would cycle widely in her native Waterford, and as a young adult she (5)\_\_\_\_\_ cycling trips to Europe whenever possible.

**SubQuestion No : 13**

**Q.13 Select the most appropriate option to fill in blank No.5.**

- Ans
- 1. has made
  - 2. is making
  - 3. made
  - 4. makes

Question ID : **2390871782**

Status : **Answered**

Chosen Option : **3**

**Q.14 Select the synonym of the given word.**

**Impolite**

- Ans
- 1. Intelligent
  - 2. Rude
  - 3. Irrelevant
  - 4. Brave

Question ID : **2390871785**  
Status : **Answered**  
Chosen Option : **2**

**Q.15 Select the most appropriate word to fill in the blank and make a meaningful sentence.**

Owing to all the recent negative turn of events in her life, she strongly felt \_\_\_\_\_ forces must be at work.

- Ans
- 1. angelic
  - 2. helpful
  - 3. evil
  - 4. haunting

Question ID : **2390871795**  
Status : **Answered**  
Chosen Option : **3**

**Q.16 Select the word which means the same as the group of words given.**

A contest between two people to settle a point of honour

- Ans
- 1. duo
  - 2. dual
  - 3. duel
  - 4. duet

Question ID : **2390871792**  
Status : **Answered**  
Chosen Option : **3**

**Q.17 Select the correctly spelt word.**

- Ans
- 1. Supplemantry
  - 2. Supplimantry
  - 3. Supplementary
  - 4. Supplimentary

Question ID : **2390871794**  
Status : **Answered**  
Chosen Option : **3**

**Q.18 Identify the segment in the sentence which contains the grammatical error from the given options.**

Its a good idea to read up on a company before going for an interview.

- Ans
- 1. read up on a company
  - 2. an interview

✓ 3. Its a good idea to

✗ 4. before going for

Question ID : 2390871772

Status : Answered

Chosen Option : 1

Q.19 Select the antonym of the given word.

Adamant

Ans ✗ 1. Stubborn

✗ 2. Coherent

✓ 3. Flexible

✗ 4. Stupid

Question ID : 2390871788

Status : Answered

Chosen Option : 3

Q.20 Select the most appropriate option to substitute the underlined segment in the given sentence. If there is no need to substitute it, select 'No substitution required'.

The detectives searched the house from top to bottom, but find any sign of the stolen goods.

Ans ✗ 1. while finding no sign

✓ 2. but found no sign

✗ 3. No substitution required

✗ 4. despite found any sign

Question ID : 2390871775

Status : Answered

Chosen Option : 2

Q.21 Identify the segment in the sentence which contains the grammatical error from the given options.

When they started, they had great ideas but lack the business know-how.

Ans ✗ 1. they had great ideas

✓ 2. but lack

✗ 3. When they started

✗ 4. the business know-how

Question ID : 2390871773

Status : Answered

Chosen Option : 2

Q.22 Select the antonym of the given word.

Delicate

Ans ✗ 1. Flimsy

✓ 2. Firm





✗ 3. Feeble

 4. Fragile

Question ID : **2390871787**  
Status : **Answered**  
Chosen Option : **2**

**Q.23 Identify the segment in the sentence which contains the grammatical error from the given options.**

**For most citizens today, liberty meant the freedom to practise their religious or political beliefs.**

- Ans
-  1. or political beliefs.
  -  2. For most citizens today
  -  3. practise their religious
  -  4. liberty meant the freedom to

Question ID : **2390871771**  
Status : **Answered**  
Chosen Option : **4**

**Q.24 Select the word which means the same as the group of words given.**





**An introduction to a book usually stating its purpose**

- Ans
-  1. Bibliography
  -  2. Acknowledgment
  -  3. Epilogue
  -  4. Preface

Question ID : **2390871791**  
Status : **Answered**  
Chosen Option : **4**

**Q.25 Select the most appropriate option to substitute the underlined segment in the given sentence. If there is no need to substitute it, select 'No substitution required'.**

**Suresh thought of a splendid idea to celebrate his parents' anniversary.**

- Ans
-  1. thought at the
  -  2. thought of
  -  3. think about a
  -  4. No substitution required

Question ID : **2390871774**  
Status : **Not Answered**  
Chosen Option : **--**

Section : **General Intelligence & Reasoning**

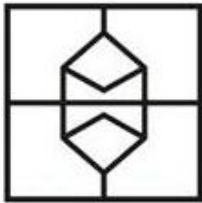
**Q.1 From the given answer figures, select the one in which the question figure is hidden/embedded.**




Ans




✓ 1.



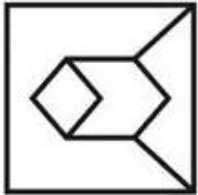
✗ 2.



✗ 3.



✗ 4.



Question ID : 2390871611

Status : Answered

Chosen Option : 1

Q.2 Select the option that is related to the third term in the same way as the second term is related to the first term.

Green : Colour :: Cricket : ?

Ans ✗ 1. Hockey

✓ 2. Game

✗ 3. Ball

✗ 4. Bat

Question ID : 2390871592

Status : Answered


Chosen Option : 2

Q.3 In the following question, select the figure which can be placed at the sign of question mark (?) from the given alternatives.



Ans

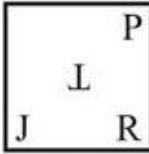
✗ 1.



✓ 2.



✗ 3.



✗ 4.



Question ID : 2390871609

Status : Not Answered

Chosen Option : --

**Q.4** In the following question below are given some statements followed by some conclusions based on those statements. Taking the given statements to be true even if they seem to be at variance from commonly known facts. Read all the conclusions and then decide which of the given conclusion logically follows the given statements.

Statements:

- I. No K is L.
- II. Some L are M.
- III. All M are G.

Conclusions:

- I. Some G are L.
- II. Some M are L.
- III. No L is K.


- Ans
- ✗ 1. Both conclusions II and III follow.
  - ✓ 2. All conclusions I, II and III follow.
  - ✗ 3. Neither conclusion follows.
  - ✗ 4. Only conclusion I follows.

Question ID : 2390871601

Status : Answered

Chosen Option : 2

**Q.5** Which answer figure will complete the pattern in the question figure?



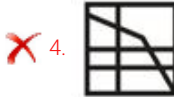
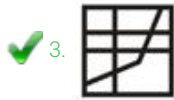
Ans

✗ 1.



✗ 2.





Question ID : 2390871610

Status : Answered

Chosen Option : 3

Q.6 In a certain code language, 'TABLE' is written as 'ATBEL'. What is the code for 'CHAIR' in that code language?

Ans ✗ 1. RIAHC

✓ 2. HCARI

✗ 3. CHARI

✗ 4. HCAIR

Question ID : 2390871595

Status : Answered

Chosen Option : 2

Q.7 Select the number that can replace the question mark (?) in the following series.

11, 14, 31, 14, 16, 34, 17, 18, 37, ?, 20, ?

Ans ✗ 1. 21, 40

✓ 2. 20, 40

✗ 3. 21, 41

✗ 4. 20, 41

Question ID : 2390871603

Status : Answered

Chosen Option : 2

Q.8 Select the option in which the letters share the same relationship as that shared by the given pair of letters.

ROJ : TQL :: ?

Ans ✗ 1. ORF : QPH

✗ 2. JAN : LCL

✗ 3. AND : CLB

✓ 4. TUE : VWG

Question ID : 2390871593

Status : Answered

Chosen Option : 4

Q.9 In the following question below are given some statements followed by some conclusions based on those statements. Taking the given statements to be true even if they seem to be at variance from commonly known facts. Read all the conclusions and then decide which of the given conclusion logically follows the given statements.

Statements:

I. Some onion are tomatoes

Latest Sarkari Jobs, Govt Exam Results, Vacancies and updates on one click

Know More

II. No tomato is potato.

Conclusions:

I. Some potato are onion.

II. No potato is tomato.

- Ans
- 1. Only conclusion I follows.
  - 2. Only conclusion II follows.
  - 3. Both conclusion I and II follows.
  - 4. Neither conclusion follow.

Question ID : 2390871602

Status : Answered

Chosen Option : 2

Q.10 In a certain code language, 'FISHES' is written as '69198519', 'BODY' is written as '215425'.  
What is the code for 'LEAD' in that code language?

- Ans
- 1. 215412
  - 2. 121514
  - 3. 12511
  - 4. 12514

Question ID : 2390871596

Status : Answered

Chosen Option : 4

Q.11 If a mirror is placed on the line AB, then which of the answer figures is the right image of the given figure?



Ans

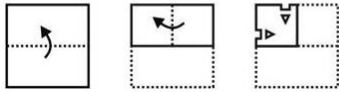
- 1.
- 2.
- 3.
- 4.

Question ID : 2390871612

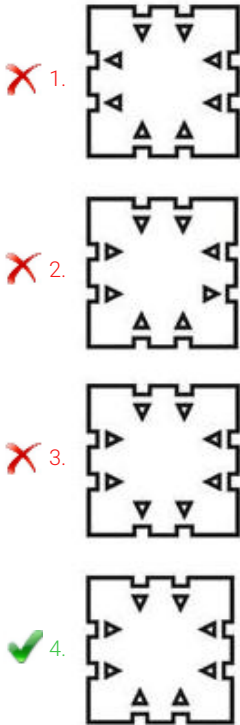
Status : Answered

Chosen Option : 1

**Q.12** A piece of paper is folded and punched as shown below in the question figures. From the given answer figures, indicate how it will appear when opened?



**Ans**



Question ID : 2390871613

Status : Answered

Chosen Option : 4

**Q.13** In the following question, select the number which can be placed at the sign of question mark (?) from the given alternatives.

6 7 3  
5 ? 5  
4 9 8  
34 30 23

- Ans**
- 1. 4
  - 2. 2
  - 3. 6
  - 4. 3

Question ID : 2390871606

Status : Answered

Chosen Option : 4

**Q.14** By interchanging which two signs the equation will be correct?

$$9 - 11 + 26 \div 78 \times 27 = 11$$

- Ans**
- 1. - and  $\times$
  - 2. - and +
  - 3. + and  $\div$
  - 4.  $\times$  and  $\div$

Question ID : 2390871607  
Status : Answered  
Chosen Option : 2

Q.15 Select the Letter Cluster that can replace the question mark (?) in the following series.

ROB, URE, XUH, ?, DAN





- Ans
- 1. BXL
  - 2. AXK
  - 3. AYK
  - 4. BYL

Question ID : 2390871590  
Status : Answered  
Chosen Option : 2

Q.16 Identify the Venn diagram that best represents the relationship between the given classes.

Fathers, Uncles, Aunts

Ans

- 1. 
- 2. 
- 3. 
- 4. 

Question ID : 2390871614  
Status : Answered  
Chosen Option : 4

Q.17 In a certain code language, 'ALGAES' is written as 'XJFLQF'. What is the code for 'ROBUST' in that code language?

- Ans
- 1. ZYAHUX
  - 2. ZYBUHX
  - 3. YYZGTW
  - 4. YXZGTW

Question ID : 2390871594  
Status : Answered  
Chosen Option : 4

Q.18 Select the number that

Latest Sarkari Jobs, Govt Exam Results,  
Vacancies and updates on one click

Know More

3, 3, 6, 24, 192, ?

- Ans
- 1. 2688
  - 2. 4992
  - 3. 3072
  - 4. 1536

Question ID : 2390871604

Status : Answered

Chosen Option : 3

Q.19 Select the option that is related to the third term in the same way as the second term is related to the first term.

Court : Tennis :: Rink : ?

- Ans
- 1. Cricket
  - 2. Chess
  - 3. Skating
  - 4. Golf

Question ID : 2390871591

Status : Answered

Chosen Option : 3

Q.20 In a certain code language, 'FORT' is written as '56', 'MAN' is written as '25'. What is the code for 'CALF' in that code language?

- Ans
- 1. 25
  - 2. 19
  - 3. 21
  - 4. 22

Question ID : 2390871597

Status : Answered

Chosen Option : 2

Q.21 Five balls L1, L2, L3, L4 and L5 are kept one above the other (not necessarily in the same order). L1 is just above L5 and just below L4. L2 is just above L3 and just below L5. How many balls are above L2?

- Ans
- 1. 1
  - 2. 3
  - 3. 2
  - 4. 4

Question ID : 2390871600

Status : Answered

Chosen Option : 2

Q.22 Select the option that is related to the third number in the same way as the second number is related to the first number.

14 : 68 :: 16 : ?

- Ans
- 1. 26

✓ 2. 78

✗ 3. 95

✗ 4. 87

Question ID : 2390871605

Status : Answered

Chosen Option : 2

Q.23 By interchanging which two signs the equation will be correct?

$$6 \div 3 \times 5 - 15 + 4 = 9$$

Ans ✗ 1.  $\div$  and  $\times$

✓ 2.  $-$  and  $\div$

✗ 3.  $\div$  and  $+$

✗ 4.  $+$  and  $-$

Question ID : 2390871608

Status : Answered

Chosen Option : 2

Q.24 Six sellers G, H, J, K, C and M are sitting around a circular table facing towards the centre (not necessarily in the same order). M is second to the left of C. H is to the immediate right of G. K is second to the right of J. C is to the immediate left of K.

Which of the following pair of sellers represents the immediate neighbours of J and G respectively?

Ans ✗ 1. KH, MC

✓ 2. CM, KH

✗ 3. CM, HM

✗ 4. CK, HM

Question ID : 2390871599

Status : Answered

Chosen Option : 2

Q.25 Six toys T1, T2, T3, T4, T5 and T6 are kept around a circular path (not necessarily in the same order). T4 is second to the left of T6. T5 is to the immediate left of T2. T1 is second to the right of T3. T3 is to the immediate right of T4.

If we start counting the number of toys towards the left of T5, then how many toys are kept between T6 and T5?

Ans ✗ 1. 1

✗ 2. 3

✓ 3. 2

✗ 4. 0

Question ID : 2390871598

Status : Answered

Chosen Option : 1

Section : Numerical Aptitude

Q.1 Average of 11 numbers is 32. If the average of first six numbers is 26 and the average of last six numbers is 36 then what is the value of the sixth number?

Ans ✗ 1. 30

Latest Sarkari Jobs, Govt Exam Results,  
Vacancies and updates on one click

Know More



2. 26

3. 32

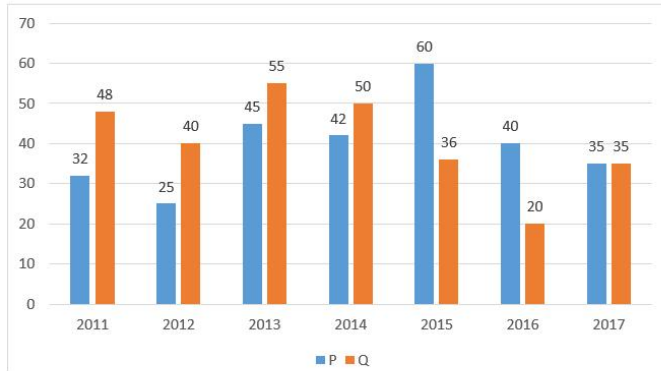
4. 20

Question ID : 2390871818

Status : Answered

Chosen Option : 4

Q.2 The Bar Graph shows the Profit (Rupees in Lakhs) earned by two companies P and Q during the period 2011 to 2017.



The ratio of average profit during the given period for Company P to Company Q is:

Ans  1. 284 : 257

2. 284 : 279

3. 279 : 284

4. 257 : 284

Question ID : 2390871839

Status : Not Answered

Chosen Option : --

Q.3 Set A contains seven numbers and the average of these numbers is 41. Set B contains five numbers and the average of these numbers is 44. The overall average of both the sets is:

Ans  1. 42.75

2. 42.5

3. 41.75

4. 42.25

Question ID : 2390871819

Status : Answered

Chosen Option : 4

Q.4 A fraction is such that the numerator is five less than the denominator. Also four times the numerator is one more than the denominator. The fraction is:

Ans  1.  $\frac{2}{7}$

2.  $\frac{7}{12}$

3.  $\frac{3}{8}$

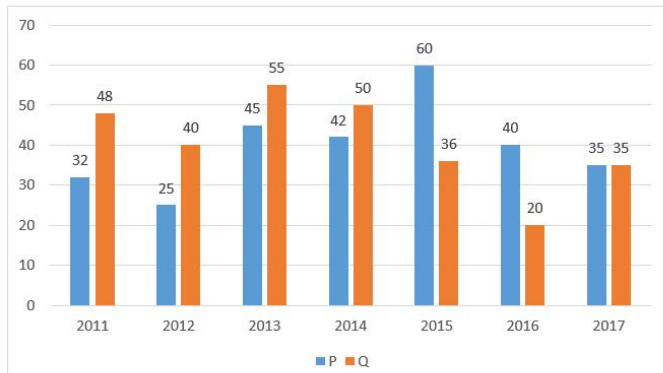
4.  $\frac{4}{7}$

Question ID : 2390871825

Status : Answered

Chosen Option : 1

**Q.5** The Bar Graph shows the Profit (Rupees in Lakhs) earned by two companies P and Q during the period 2011 to 2017.



In which year company P earns the maximum profit as compared to the previous year?

- Ans
- 1. 2016
  - 2. 2017
  - 3. 2013
  - 4. 2015

Question ID : 2390871837

Status : Answered

Chosen Option : 3

**Q.6** The value of

$$(3576 + 4286 + 6593) \div (201 + 105 + 107) \text{ is:}$$

- Ans
- 1. 18
  - 2. 31
  - 3. 35
  - 4. 22

Question ID : 2390871816

Status : Answered

Chosen Option : 3

**Q.7** If in a triangle, angles are in the ratio 1:1:2 and the length of its longest side is  $6\sqrt{2}$  cm, then what is the Area (in  $\text{cm}^2$ ) of the triangle?

- Ans
- 1.  $18\sqrt{2}$
  - 2.  $36\sqrt{2}$
  - 3. 36
  - 4. 18

Question ID : 2390871835

Status : Answered

Chosen Option : 4

**Q.8** Amar, Bhavan, Chetan and Dinesh have a total of ₹150 with them. Amar has one-fourth of the total amount with the others. The amount with Amar (in ₹) is:

- Ans**
- 1. 25
  - 2. 20
  - 3. 37.5
  - 4. 30

Question ID : **2390871826**  
Status : **Answered**  
Chosen Option : **4**

**Q.9** If speed of stream is 20% of the speed of boat in still water and it covers 120 km upstream in 150 minutes, then what is the downstream speed of the boat?

- Ans**
- 1. 75 km/h
  - 2. 64 km/h
  - 3. 72 km/h
  - 4. 80 km/h

Question ID : **2390871832**  
Status : **Not Answered**  
Chosen Option : --

**Q.10** A room is in the shape of cube and the length of the longest rod placed in it is  $21\sqrt{3}$  cm. The area of the floor is:

- Ans**
- 1.  $961 \text{ cm}^2$
  - 2.  $144 \text{ cm}^2$
  - 3.  $441 \text{ cm}^2$
  - 4.  $169 \text{ cm}^2$

Question ID : **2390871836**  
Status : **Answered**  
Chosen Option : **3**

**Q.11** If 40% of  $x$  equal 50% of  $y$ , then  $y : x$  is:

- Ans**
- 1. 5 : 4
  - 2. 3 : 2
  - 3. 4 : 5
  - 4. 2 : 3

Question ID : **2390871827**  
Status : **Answered**  
Chosen Option : **3**

**Q.12** If height of a circular cone is decreased by 10% and its radius is increased by 10%, then what will be the change in its volume?

- Ans**
- 1. Decreases by 3.2%.
  - 2. Decreases by 8.9%.
  - 3. Increases

✓ 4. Increases by 8.9%.

Question ID : 2390871834  
Status : Answered  
Chosen Option : 4

Q.13 A contractor takes a contract to complete a road in 60 days and employed 70 labours. After 25 days, he found that one fourth work is completed. How many more labours he requires to complete the remaining work in time?

- Ans
- ✗ 1. 90
  - ✓ 2. 80
  - ✗ 3. 85
  - ✗ 4. 82

Question ID : 2390871830  
Status : Answered  
Chosen Option : 1

Q.14 A sum doubles in seven years at simple interest. In how many years will the sum become five times the original sum?

- Ans
- ✗ 1. 30
  - ✗ 2. 35
  - ✗ 3. 21
  - ✓ 4. 28

Question ID : 2390871828  
Status : Answered  
Chosen Option : 4

Q.15 If 20% of the goods are sold at 50% profit, 40% of the goods at 20% loss, 20% of the goods at 5% loss and the remaining at no loss or no profit, then the overall profit percentage is:

- Ans
- ✓ 1. 1%
  - ✗ 2. 4%
  - ✗ 3. 8%
  - ✗ 4. 5%

Question ID : 2390871824  
Status : Not Answered  
Chosen Option : --

Q.16 If  $x \times y$  denotes H.C.F of  $x$  and  $y$  and  $x @ y$  denotes LCM of  $x$  and  $y$ , then the value of  $(72 \times 84) @ 144$  is:

- Ans
- ✗ 1. 504
  - ✗ 2. 420
  - ✓ 3. 144
  - ✗ 4. 210

Question ID : 2390871815  
Status : Answered  
Chosen Option : 3

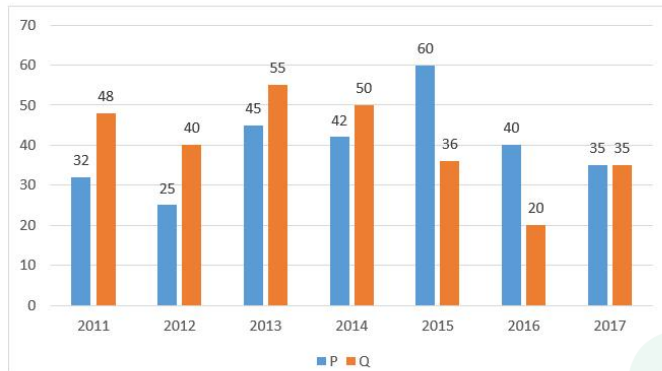
Q.17

The simple interest on a sum of money for 2 years at certain rate of interest is ₹320. The compound interest, compounded annually on the same sum for the same duration and at the same rate of interest is ₹384. The sum (in ₹) is:

- Ans
- 1. 400
  - 2. 250
  - 3. 200
  - 4. 309

Question ID : 2390871829  
Status : Answered  
Chosen Option : 1

Q.18 The Bar Graph shows the Profit (Rupees in Lakhs) earned by two companies P and Q during the period 2011 to 2017.



In which year the profit of two companies, taken together, is maximum:

- Ans
- 1. 2015
  - 2. 2017
  - 3. 2014
  - 4. 2013

Question ID : 2390871838  
Status : Answered  
Chosen Option : 4

Q.19 In a 100 m race, A beats B by 10 m and B beats C by 10 m. By what distance does A beat C (in m)?

- Ans
- 1. 21
  - 2. 19
  - 3. 18
  - 4. 20

Question ID : 2390871833  
Status : Not Answered  
Chosen Option : --

Q.20 In an exam, A gets 20% less than the passing marks and B gets 20% more than passing marks. If the sum of marks obtained by A and B is equal to maximum marks, what is the ratio of passing marks to maximum marks?

- Ans
- 1. 1 : 2
  - 2. 1 : 1

3. 2 : 1

4. 1 : 4

Question ID : **2390871822**  
Status : **Answered**  
Chosen Option : **1**

**Q.21** A shopkeeper sold an article for ₹180 by making a profit of 20%. The shopkeeper offered a discount of ₹30 on the marked price. How much percent above the cost price the article is marked?

Ans  1. 35%

2. 40%

3. 30%

4. 25%

Question ID : **2390871823**  
Status : **Answered**  
Chosen Option : **2**

**Q.22** The marks of Nine students in ascending order for a test are given below with Median as 34, the value of k is:

12, 16, k, 28, k + 5, 32, 39, 47, 53.

Ans  1. 27

2. 30

3. 29

4. 32

Question ID : **2390871821**  
Status : **Answered**  
Chosen Option : **3**

**Q.23** The value of x

$45 \times x = 25\%$  of 900 is:

Ans  1. 500

2. 16.2

3. 4

4. 5

Question ID : **2390871817**  
Status : **Answered**  
Chosen Option : **4**

**Q.24** Shuarya marked an article at 40% above its cost price. He sells it after allowing a discount of 15%. The profit percentage of the article is:

Ans  1. 17%

2. 15%

3. 19%

**X** 4. 20%

Question ID : **2390871820**  
Status : **Answered**  
Chosen Option : **3**

**Q.25** Working together, A and B can complete a work in 12 days. They work together for 9 days after which B leaves. If A finishes the remaining work in 5 days, then the number of days that B alone would take to complete the work is:

- Ans**
- X** 1. 12
  - X** 2. 15
  - X** 3. 24
  - ✓** 4. 30

Question ID : **2390871831**  
Status : **Answered**  
Chosen Option : **4**

Section : **General awareness**

**Q.1** Who among the following was greatest ruler of Pratihara Dynasty?

- Ans**
- X** 1. Ramabhadra
  - X** 2. Nagabhata
  - ✓** 3. Mihir Bhoja
  - X** 4. Samantasena

Question ID : **2390871237**  
Status : **Answered**  
Chosen Option : **2**

**Q.2** Which of the following energy is NOT from sea?

- Ans**
- X** 1. Tidal Energy
  - X** 2. Wave Energy
  - X** 3. Ocean Thermal Energy
  - ✓** 4. Geothermal Energy

Question ID : **2390871233**  
Status : **Not Answered**  
Chosen Option : **--**

**Q.3** Which of the following Country is NOT a member of World Trade Organization?

- Ans**
- X** 1. Guinea
  - X** 2. Norway
  - X** 3. Israel
  - ✓** 4. Iran

Question ID : **2390871223**  
Status : **Not Answered**  
Chosen Option : **--**

**Q.4** Which city will be host

Latest Sarkari Jobs, Govt Exam Results,  
Vacancies and updates on one click

Know More

- Ans
- 1. London
  - 2. Tokyo
  - 3. Paris
  - 4. Beijing

Question ID : 2390871219  
Status : Answered  
Chosen Option : 2

Q.5 Who was the President of India during the State of Emergency (1975-77)?

- Ans
- 1. Dr. Zakir Hussain
  - 2. Dr. Fakhruddin Ali Ahmed
  - 3. Giani Zail Singh
  - 4. Shri Neelam Sanjiva Reddy

Question ID : 2390871228  
Status : Answered  
Chosen Option : 2

Q.6 The Khurda Uprising took place in the year:

- Ans
- 1. 1917
  - 2. 1822
  - 3. 1817
  - 4. 1875

Question ID : 2390871238  
Status : Not Answered  
Chosen Option : --

Q.7 In which of the following states is Kandla port situated?

- Ans
- 1. Gujarat
  - 2. Maharashtra
  - 3. Odisha
  - 4. Goa

Question ID : 2390871236  
Status : Answered  
Chosen Option : 1

Q.8 Who among the following was called as 'Ajatshatru' by Gandhiji?

- Ans
- 1. Bal Gangadhar Tilak
  - 2. Bhagat Singh
  - 3. Lala Lajpat Rai
  - 4. Dr. Rajendra Prasad

Question ID : 2390871221  
Status : Answered  
Chosen Option : 4



Q.9 What is the symbol of element Lead?

- Ans
- 1. S
  - 2. Ag
  - 3. K
  - 4. Pb

Question ID : 2390871231  
Status : Answered  
Chosen Option : 4

Q.10 Who is the writer of 'Revolution 2020'?

- Ans
- 1. Vikram Seth
  - 2. Amish Tripathi
  - 3. Chetan Bhagat
  - 4. Ravindra Singh

Question ID : 2390871220  
Status : Not Answered  
Chosen Option : --

Q.11 Which of the following is NOT a characteristic of sound wave?

- Ans
- 1. Amplitude
  - 2. Nature
  - 3. Wavelength
  - 4. Velocity

Question ID : 2390871229  
Status : Answered  
Chosen Option : 4

Q.12 What should be the investment of Micro enterprises in plant & machinery (Manufacturing Sector)?

- Ans
- 1. Not more than twenty five lakh
  - 2. Between twenty five lakh and fifty lakh
  - 3. More than twenty five lakh
  - 4. More than fifty lakh

Question ID : 2390871224  
Status : Not Answered  
Chosen Option : --

Q.13 In which of the following period Ostriches were found in India?

- Ans
- 1. Megalithic Period
  - 2. Neolithic Period
  - 3. Palaeolithic Period
  - 4. Mesolithic Period

Question ID : 2390871239  
Status : Not Answered

Chosen Option : --

**Q.14 Who among the following suggested that life must have developed from simple inorganic molecule?**

- Ans
- 1. Stanley L. Miller
  - 2. J.B.S. Haldane
  - 3. Gregor Mendel
  - 4. Charles Darwin

Question ID : **2390871230**

Status : **Not Answered**

Chosen Option : --

**Q.15 Who built the Sheesh Mahal in Patiala?**

- Ans
- 1. Yadavindra Singh
  - 2. Baba Ala Singh Sidhu
  - 3. Bhalindra Singh
  - 4. Maharaja Narinder Singh

Question ID : **2390871217**

Status : **Not Answered**

Chosen Option : --

**Q.16 Where was the first International Earth Summit held?**

- Ans
- 1. Stockholm
  - 2. Rio de Janeiro
  - 3. New York
  - 4. Johannesburg

Question ID : **2390871234**

Status : **Answered**

Chosen Option : **1**

**Q.17 Lavani is a folk dance of which of the following states of India?**

- Ans
- 1. Maharashtra
  - 2. Jharkhand
  - 3. Gujarat
  - 4. Rajasthan

Question ID : **2390871215**

Status : **Not Answered**

Chosen Option : --

**Q.18 Which of the following is NOT a process of water cycle?**

- Ans
- 1. Transpiration
  - 2. Ammonification
  - 3. Condensation
  - 4. Evaporation

Question ID : **2390871232**  
Status : **Answered**  
Chosen Option : **2**

**Q.19 As of June 2019, who is the Human Resource Development (HRD) Minister of India?**

- Ans
- 1. Piyush Goel
  - 2. Ramvilas Paswan
  - 3. Ramesh Pokhriyal
  - 4. Smriti Zubin Irani

Question ID : **2390871227**  
Status : **Answered**  
Chosen Option : **3**

**Q.20 Where is Tansen Samaroh celebrated?**

- Ans
- 1. Gwalior
  - 2. Jabalpur
  - 3. Bhopal
  - 4. Indore

Question ID : **2390871216**  
Status : **Not Answered**  
Chosen Option : **--**

**Q.21 Which of the following cricket playing nations secured the Test Championship title for a third successive year in March 2019?**

- Ans
- 1. South Africa
  - 2. Australia
  - 3. India
  - 4. England

Question ID : **2390871218**  
Status : **Answered**  
Chosen Option : **3**

**Q.22 Who is the founder of Indian Overseas Bank?**

- Ans
- 1. Devkaran Nanjee
  - 2. V. G. Kale
  - 3. Rana Kapoor
  - 4. M. Chidambaram Chettyar

Question ID : **2390871225**  
Status : **Answered**  
Chosen Option : **4**

**Q.23 Which of the Article of Indian Constitution tells about the election of President?**

- Ans
- 1. Article 51A
  - 2. Article 53
  - 3. Article 54

4. Article 51

Question ID : **2390871226**  
Status : **Not Answered**  
Chosen Option : --

**Q.24 Which of the following element is found in the Balaghat Mines of Madhya Pradesh?**

- Ans  1. Copper  
 2. Gold  
 3. Graphite  
 4. Zinc

Question ID : **2390871235**  
Status : **Not Answered**  
Chosen Option : --

**Q.25 Which of the following award is NOT given by Madhya Pradesh Government?**

- Ans  1. Kishore Kumar Award  
 2. Kalidas Samman  
 3. Lata Mangeshkar Award  
 4. Rani Laxmi Bai Award

Question ID : **2390871222**  
Status : **Not Answered**  
Chosen Option : --



# Latest Sarkari jobs, Govt Exam alerts, Results and Vacancies

- ▶ Latest News and Notification
- ▶ Exam Paper Analysis
- ▶ Topic-wise weightage
- ▶ Previous Year Papers with Answer Key
- ▶ Preparation Strategy & Subject-wise Books

To know more [Click Here](#)



[www.prepp.in](http://www.prepp.in)