



Practice, Learn and Achieve  
Your Goal with Prepp

# DSSSB Asst. Teacher

Paper 2

Simplifying  
Government Exams



SSC CHSL



IAS EXAM



RRB NTPC



NTSE



CDS



SSC CGL



CBSE UGC NET



IBPS PO



NDA



SBI PO



IBPS CLERK



AFCAT



SSC JE



CTET



CSIR UGC NET



CAPF



IBPS RRB

[www.prepp.in](http://www.prepp.in)



GOVT. OF NCT OF DELHI  
Delhi Subordinate Services Selection Board  
FC-18, Institutional Area, Karkardooma, Delhi – 110092.  
[www.dsssb.delhigovt.nic.in](http://www.dsssb.delhigovt.nic.in)

Test Date	19/11/2019
Test Time	12:30 PM - 2:30 PM
Subject	Assistant Teacher Nursery

Section : Mental Ability

Q.1 Ishika said to Firoz, "You are my son's wife's father-in-law." How is Firoz related to Ishika?

- Ans  1. Firoz is the husband of Ishika  
 2. Firoz is the father in law of Ishika  
 3. Firoz is the brother in law of Ishika  
 4. Firoz is the father of Ishika

Question ID : 71939920023

Q.2 Manoj, Pranay, Esha, Wasim, Tina and Diksha are sitting in a circle facing the centre. Manoj is opposite Esha, who is to the right of Diksha and who is not next to Pranay or Wasim. Esha is between Pranay and Diksha. Who is to the left of Wasim?

- Ans  1. Manoj  
 2. Esha  
 3. Pranay  
 4. Tina

Question ID : 71939920025

Q.3 If STEAM is coded as 21-22-7-3-15, then what is JUNK coded as?

- Ans  1. 12-23-15-13  
 2. 10-21-14-11  
 3. 11-22-15-12  
 4. 12-23-16-13

Question ID : 71939920022

Q.4 A car travels 50 km north, then it turns west and travels 140 km, then it turns north and travels 90 km, then it turns east and travels 80 km, then it turns north and travels 20 km, then it turns to its right and travels 60 km. Where is it now with respect to its starting position?

- Ans  1. 190 km north  
 2. 160 km north  
 3. 190 km south  
 4. 160 km south

Question ID : 71939920033

Q.5 In the given options, 3 pair of letters are similarly related and one pair is differently related. Find the pair which is differently related.

- Ans  1. NT : SA

- 2. KY : PD
- 3. OU : TZ
- 4. CF : HK

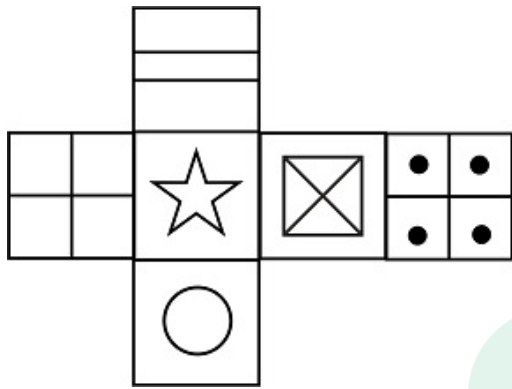
Question ID : 71939920019

**Q.6** If A is costlier than object B; D is costlier than object A; and B is costlier than C, which one among these is the costliest?

- Ans  1. D
- 2. A
  - 3. B
  - 4. C

Question ID : 71939920024

**Q.7** Which of the following cubes in the answer figure CANNOT be made based on the unfolded cube in the question figure?



Ans

- 1.
- 2.
- 3.
- 4.

Question ID : 71939920036

**Q.8** Select the option that is related to the third term on the same basis as the second term is related to the first term.

IVD : OBJ :: NSF : ?

- Ans  1. RYL
- 2. TWJ

✓ 3. TYL

✗ 4. RWJ

Question ID : 71939920021

**Q.9** Find the missing term in the following letter series:

JL, OQ, \_\_\_\_\_, YA

Ans ✓ 1. TV

✗ 2. SV

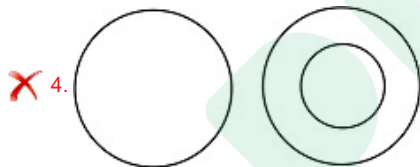
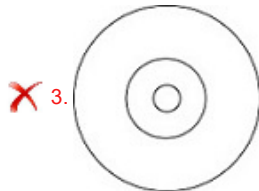
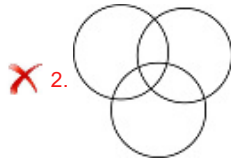
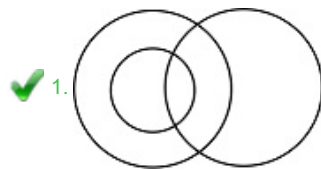
✗ 3. SU

✗ 4. TU

Question ID : 71939920017

**Q.10** Which of the following Venn diagrams best represents the relationship between mothers, women and doctors?

Ans



Question ID : 71939920030

**Q.11** Find the missing number in the following number series.

60, 180, \_\_\_\_\_, 420, 540

Ans ✗ 1. 240

✗ 2. 260

✗ 3. 320

✓ 4. 300

Question ID : 71939920029

**Q.12** In this question, a statement has been given, followed by two arguments numbered I and II. Analyse the two arguments together and determine which of them follows.

**Statement:** India is a developing country.

**Arguments:**

I) Education is a key drive for the development.

II) Diseases and poor health is a challenge in India.

Ans ✗ 1. Either I or II follows

- 2. Only argument I follows
- 3. Only argument II follows
- 4. Both I and II follow

Question ID : 71939920026

**Q.13** Select the option that is related to the third term on the same basis as the second term is related to the first term.

Surgeon : Operate :: Judge : ?

- Ans
- 1. Court
  - 2. Criminal
  - 3. Hearing
  - 4. Lawyer

Question ID : 71939920020

**Q.14** Nishita started her journey facing East and went for 3 km. She turns right and walked for 4 km. Then, she turned to her left and walked for 5 km. To which direction is Nishita's starting point with respect to where she is standing now?

- Ans
- 1. North-West
  - 2. South-East
  - 3. North-East
  - 4. South-West

Question ID : 71939920032

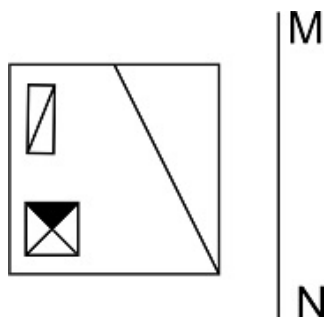
**Q.15** Find the wrong term in the following series:

MPS, KMO, HJL, DFH, BDF

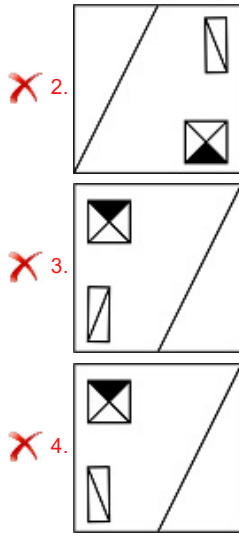
- Ans
- 1. HJL
  - 2. DFH
  - 3. KMO
  - 4. MPS

Question ID : 71939920018

**Q.16** If a mirror is placed on the line MN, then which of the answer figures will be the right mirror image of the given figure?



- Ans
- 1.



Question ID : 71939920035

**Q.17 Complete the following number series:**

252, 280, 310, 342, \_\_\_\_\_.

- Ans
- 1. 374
  - 2. 376
  - 3. 378
  - 4. 372

Question ID : 71939920028

**Q.18 In this question, two statements have been given followed by two conclusions numbered I and II. Assuming that all information in the statement is true, analyse the two conclusions together and determine whether any of them logically and definitely follow(s) from the information given in the statement.**

**Statements:**

- I. All tables are chairs.
- II. All chairs are almirahs.

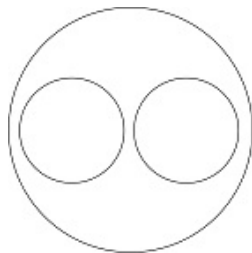
**Conclusions:**

- I. Some almirahs are chairs.
- II. Some almirahs are tables.

- Ans
- 1. Only conclusion I follows
  - 2. Only conclusion II follows
  - 3. Both I and II follow
  - 4. Neither I nor II follows

Question ID : 71939920027

**Q.19 The Venn diagram given in the question represents the relationship between the items given in which of the following options?**



- Ans
- 1. fathers, masons and women
  - 2. apples, brinjals and vegetables
  - 3. flowers, leaves and roots

[Know More](#)

✓ 4. cars, cycles and vehicles

Question ID : 71939920031

**Q.20** Out of the given options, three are similar in a certain manner. However, one option is NOT like the other three. Select the option which is different from the rest.

Ans

- ✗ 1.
- ✗ 2.
- ✗ 3.
- ✓ 4.

Question ID : 71939920034

Section : General Awareness

**Q.1** 14th Constitutional Amendment incorporated \_\_\_\_\_ in the Indian Union.

- Ans ✓ 1. Puducherry
- ✗ 2. Goa
- ✗ 3. Daman and Diu
- ✗ 4. Dadra and Nagar Haveli

Question ID : 71939920053

**Q.2** \_\_\_\_\_ law states that the net flow of an electric field through a closed surface is proportional to the enclosed electric charge.

- Ans ✗ 1. Coulomb's
- ✓ 2. Gauss's
- ✗ 3. Boyles's
- ✗ 4. Hooke's

Question ID : 71939920041

**Q.3** \_\_\_\_\_ is a type of religious songs often sung to a newly wed bride or to an unmarried girl, who is expected to get married in near future.

- Ans ✗ 1. Ladishah
- ✓ 2. Ainchaliyan
- ✗ 3. Chakri
- ✗ 4. Jhoori



Question ID : 71939920038

Q.4 The famous Kakori Train Dacoity took place on \_\_\_\_\_.

- Ans
- 1. 10th April 1928
  - 2. 20th May 1927
  - 3. 15th March 1929
  - 4. 9th August 1925

Question ID : 71939920049

Q.5 As announced in the Budget 2019, the Aspirational Districts Programme is providing targeted development to the \_\_\_\_\_ most backward districts of the country.

- Ans
- 1. 110
  - 2. 120
  - 3. 112
  - 4. 115

Question ID : 71939920040

Q.6 \_\_\_\_\_ won the South Asian Football Federation (SAFF) U-18 Championship 2019.

- Ans
- 1. Nepal
  - 2. Bangladesh
  - 3. India
  - 4. Bhutan

Question ID : 71939920055

Q.7 This famous personality was awarded the knighthood in 1915 but returned it in 1919 as a protest against the Jallianwala Bagh Massacre. Who was he?

- Ans
- 1. Aurobindo Ghosh
  - 2. Rabindranath Tagore
  - 3. Mahatma Gandhi
  - 4. Annie Besant

Question ID : 71939920052

Q.8 The Brihadisvara Temple is associated with \_\_\_\_\_ dynasty.

- Ans
- 1. Solankis
  - 2. Cholas
  - 3. Pallavas
  - 4. Chalukyas

Question ID : 71939920048

Q.9 The Treaty of Madras was signed between the British and \_\_\_\_\_.

- Ans
- 1. Tipu Sultan
  - 2. Hyder Ali
  - 3. Shivaji Maharaj
  - 4. Shah Alam II

Question ID : 71939920047



Q.10 Article 19 of the Constitution guarantees \_\_\_\_\_ rights to all the citizens.

- Ans
- 1. five
  - 2. three
  - 3. four
  - 4. six

Question ID : 71939920054

Q.11 The youngest Indian to captain its test cricket team is \_\_\_\_\_.

- Ans
- 1. Mahendra Singh Dhoni
  - 2. Sachin Tendulkar
  - 3. Rahul Dravid
  - 4. Mansoor Ali Khan Pataudi

Question ID : 71939920056

Q.12 The \_\_\_\_\_ Ocean has the largest number of trenches.

- Ans
- 1. Pacific
  - 2. Arctic
  - 3. Indian
  - 4. Atlantic

Question ID : 71939920046

Q.13 "My Unforgettable Memories" is the autobiography of \_\_\_\_\_.

- Ans
- 1. Rahul Gandhi
  - 2. Narendra Modi
  - 3. Mamata Banerjee
  - 4. Arvind Kejriwal

Question ID : 71939920050

Q.14 Tapi river discharges it's water in \_\_\_\_\_.

- Ans
- 1. Bay of Bengal
  - 2. Andaman sea
  - 3. Indian ocean
  - 4. Arabian sea

Question ID : 71939920044

Q.15 Cheraw is a folk dance of \_\_\_\_\_.

- Ans
- 1. Sikkim
  - 2. Mizoram
  - 3. Nagaland
  - 4. Maharashtra

Question ID : 71939920037

Q.16 Fusion between one large, non-motile (static) female gamete and a smaller, motile male gamete in algae is termed as \_\_\_\_\_.

- Ans
- 1. isogamous

- 2. anisogamous
- 3. zoospores
- 4. oogamous

Question ID : 71939920042

**Q.17 Which of the following is not true about desert soil?**

- Ans
- 1. Lack of moisture and Humus.
  - 2. Low salt content.
  - 3. Nitrogen is insufficient and Phosphate is normal.
  - 4. Seen under Arid and Semi-Arid conditions.

Question ID : 71939920045

**Q.18 Which of the following is not an example of elemental gas?**

- Ans
- 1. Hydrogen
  - 2. Oxygen
  - 3. Nitrogen
  - 4. Carbon dioxide

Question ID : 71939920043

**Q.19 The headquarter of United Nations Populations Fund (UNFPA) is located at \_\_\_\_\_.**

- Ans
- 1. Geneva
  - 2. Paris
  - 3. Washington D.C.
  - 4. New York

Question ID : 71939920051

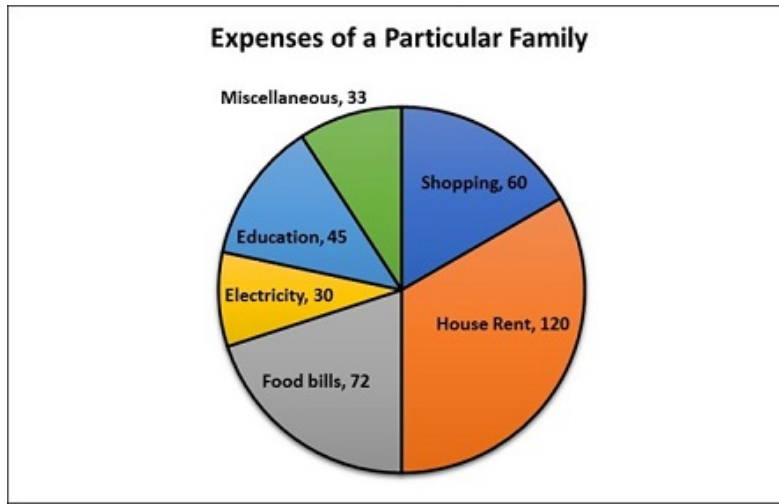
**Q.20 Primary Land Development Bank operates at \_\_\_\_\_ level.**

- Ans
- 1. state
  - 2. national
  - 3. town
  - 4. district

Question ID : 71939920039

Section : Arithmetic Ability

**Q.1 The pie chart shows the various kinds of expenses of a particular family for a month. The amount spent on electricity for the month is Rs. 4500. What is the total amount spent by the family?**



- Ans
- 1. Rs. 90000
  - 2. Rs. 54000
  - 3. Rs. 49500
  - 4. Rs. 45000

Question ID : 71939920074

**Q.2** A sum of money is to be distributed among A, B, C and D in the ratio of 7:8:9:10. If C gets Rs. 500 more than B, then how much did D receive?

- Ans
- 1. Rs. 4000
  - 2. Rs. 3500
  - 3. Rs. 4500
  - 4. Rs. 5000

Question ID : 71939920066

**Q.3** A shopkeeper earns 540% profit on cost. If the cost increases by 60% whereas the selling price remains the same, find the ratio of the new profit to selling price.

- Ans
- 1. 7:9
  - 2. 13:14
  - 3. 2:3
  - 4. 3:4

Question ID : 71939920065

**Q.4** A can do a work in 60 days and is thrice as efficient as B. In how many days will they be together able to complete the work if A joins B every 3rd day?

- Ans
- 1. 120
  - 2. 30
  - 3. 60
  - 4. 90

Question ID : 71939920071

**Q.5** A principal of Rs. 30000 amounts to Rs. 36000 in 5 years at simple interest. What will be the compound interest on the same principal for 2 years?

- Ans
- 1. Rs. 2448
  - 2. Rs. 2444
  - 3. Rs. 2442

4. Rs. 2446

Question ID : 71939920068

**Q.6** Which number's square when multiplied by 10 will be exactly divisible by 30, 36 and 40?

- Ans
- 1. 18
  - 2. 8
  - 3. 6
  - 4. 12

Question ID : 71939920059

**Q.7** Find the value of:  $54/9 \times 36/4/3$

- Ans
- 1. 18
  - 2. 12
  - 3. 24
  - 4. 15

Question ID : 71939920057

**Q.8** A farmer raises chickens and horses on a farm. In total he has 35 animals whereas the total number of legs are 100. Find the number of horses he has.

- Ans
- 1. 20
  - 2. 10
  - 3. 18
  - 4. 15

Question ID : 71939920061

**Q.9** If  $a+b=70$  and  $a-b=30$ , then what is the value of  $ab$ ?

- Ans
- 1. 750
  - 2. 250
  - 3. 1000
  - 4. 500

Question ID : 71939920060

**Q.10** Convert 10011001 binary to decimal.

- Ans
- 1. 151
  - 2. 153
  - 3. 152
  - 4. 154

Question ID : 71939920058

**Q.11** What is the error percentage if a number which was supposed to be divided by  $5/8$  was multiplied by  $5/8$  instead?

- Ans
- 1. 120 percent
  - 2. 156 percent
  - 3. 39 percent
  - 4. 144 percent

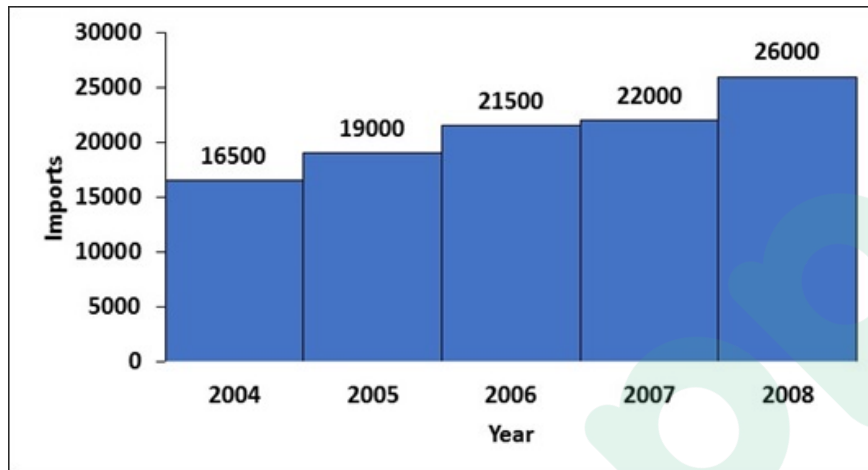
Question ID : 71939920063

Q.12 Two cars started a race together. A car travels at 180 kmph and the other one at 40 m/s. What will be the time difference in which the cars finished the race of 90 kms?

- Ans
- 1. 360 seconds
  - 2. 450 seconds
  - 3. 540 seconds
  - 4. 750 seconds

Question ID : 71939920070

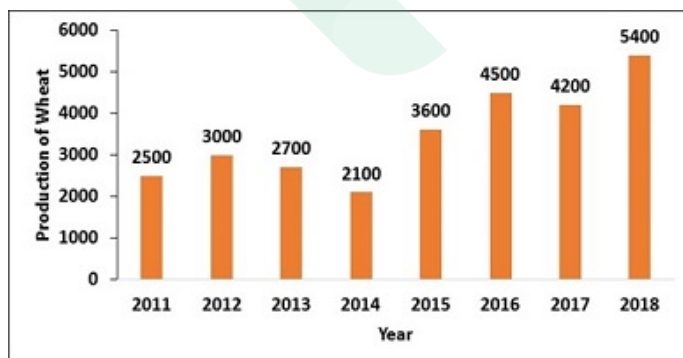
Q.13 The histogram shows the imports of coal (in tonnes) over a period of time. What is the average amount of imports for the period?



- Ans
- 1. 21000 tonnes
  - 2. 23000 tonnes
  - 3. 20000 tonnes
  - 4. 22000 tonnes

Question ID : 71939920076

Q.14 The bar chart shows the production of wheat (in tonnes) over a period of time. What is difference between the highest 2 productions and the lowest 2 productions?



- Ans
- 1. 3300 tonnes
  - 2. 4000 tonnes
  - 3. 4500 tonnes
  - 4. 5300 tonnes

Question ID : 71939920075

Q.15 The price of a bike increases to Rs. 100000 after 3 increases. The 1st increase being 25%, 2nd being 12.50% and 11.11% being the 3rd. Find the original price.

Ans

- 1. Rs. 32000
- 2. Rs. 100000
- 3. Rs. 64000
- 4. Rs. 48000

Question ID : 71939920064

Q.16 A family comprised of a couple and their 4 children. 7 years ago, the average age of the family was 25 years. A year ago, the average age of the wife and the children was 28 years. Find the present age of the husband.

- Ans
- 1. 37 years
  - 2. 42 years
  - 3. 48 years
  - 4. 47 years

Question ID : 71939920062

Q.17 A and B together have Rs. 3500. If  $\frac{1}{2}$  of A's amount is equal to  $\frac{2}{3}$  of B's amount, how much does A have?

- Ans
- 1. Rs. 1500
  - 2. Rs. 2500
  - 3. Rs. 500
  - 4. Rs. 2000

Question ID : 71939920067

Q.18 A train travels at a speed of 90 kmph while another train travels at a speed of 30 m/s. They start at the same point. Find the distance between them after 1 minute.

- Ans
- 1. 360 m
  - 2. 300 m
  - 3. 200 m
  - 4. 240 m

Question ID : 71939920069

Q.19 A park is in the shape of a trapezium. Find the size of the smaller one of parallel sides of the park if its area is 450 sq m, the perpendicular height is 12 m and one of the parallel sides is 50% more than the other?

- Ans
- 1. 30 m
  - 2. 36 m
  - 3. 40 m
  - 4. 25 m

Question ID : 71939920073

Q.20 What is the percentage increase in the volume of a cube if each of its sides increases by 10%?

- Ans
- 1. 31 percent
  - 2. 33.10 percent
  - 3. 21 percent
  - 4. 30 percent

Question ID : 71939920072

## Section : General English

**Q.1** Select the word that fills in the blank correctly and completes the sentence meaningfully.

Cognition can be \_\_\_\_\_ as the first step in the sequence of events leading from the external stimulus to the behaviour of the individual.

- Ans
- 1. see
  - 2. saw
  - 3. has see
  - 4. seen

Question ID : 71939920082

**Q.2** The questions below consist of a set of labelled parts of a sentence. Out of four options given, select the most logical order of the parts which form a coherent sentence.

The only difference between  
P: ribbon impregnated with  
Q: the first operation and regular  
R: every day typing is that a special  
S: hectograph ink is needed

- Ans
- 1. SQRP
  - 2. RSPQ
  - 3. PQRS
  - 4. QRPS

Question ID : 71939920084

**Q.3** Select the option that best expresses the meaning of the idiom or phrase given below.

In the nick of time

- Ans
- 1. To not have time
  - 2. To solve two problems at a time
  - 3. At the last moment
  - 4. From the beginning

Question ID : 71939920089

**Q.4** Select the option that best expresses the meaning of the idiom or phrase given below.

Out on a limb

- Ans
- 1. To be in agreement with
  - 2. Do something risky
  - 3. To admire someone very much
  - 4. Do something unexpectedly

Question ID : 71939920090

**Q.5** Select the word that fills in the blank correctly and completes the sentence meaningfully.

The highly technical civilisation of the 20th Century is like a plane in flight, \_\_\_\_\_ by its forward motion.

- Ans
- 1. supporting
  - 2. supported
  - 3. is supporting



4. support

Question ID : 71939920081

**Q.6** Select the word segment that substitutes (replaces) the bracketed word segment correctly and completes the sentence meaningfully. If there is no need to substitute it, select "No Correction"

Venture capitalists are the newest breed of entrepreneurs who are usually wealthy enough (to started) their own business.

- Ans
- 1. by started
  - 2. No correction
  - 3. by start
  - 4. to start

Question ID : 71939920079

**Q.7** Select the word that is closest in meaning (SYNONYM) to the word given below.

Deride

- Ans
- 1. Mock
  - 2. Blame
  - 3. Inspire
  - 4. Defend

Question ID : 71939920085

**Q.8** Select the word that is spelled correctly.

- Ans
- 1. Bibliphole
  - 2. Biblophile
  - 3. Bibliphile
  - 4. Bibliophile

Question ID : 71939920088

**Q.9** Select the most appropriate 'one word' for the expressions given below.

A person difficult to please

- Ans
- 1. Fastidious
  - 2. Parasite
  - 3. Altruist
  - 4. Centenarian

Question ID : 71939920091

**Q.10** The questions below consist of a set of labelled parts of a sentence. Out of four options given, select the most logical order of the parts which form a coherent sentence.

The Chittagong armoury raid

P: was an attempt to raid the armoury of

Q: Chittagong armoury in the Bengal

R: police and auxiliary forces from the

S: Presidency of British India

- Ans
- 1. SQRP
  - 2. PRQS
  - 3. RSQP
  - 4. QSPR

Question ID : 71939920083

Q.11 Select the word that is spelled correctly.

- Ans  1. Cynic  
 2. Synic  
 3. Cinic  
 4. Sinic

Question ID : 71939920087

Q.12 Select the word that is opposite in meaning (ANTONYM) to the word given below.

Veteran

- Ans  1. Noble  
 2. Novice  
 3. Bright  
 4. Dull

Question ID : 71939920086

Q.13 Select the word segment that substitutes (replaces) the bracketed word segment correctly and completes the sentence meaningfully. If there is no need to substitute it, select "No Correction"

Stonehenge (have capture) the hearts of people from pre-historic times due to its unique structure.

- Ans  1. has capture  
 2. have captured  
 3. has captured  
 4. No correction

Question ID : 71939920080

Q.14 The sentence below has been divided into three parts. Select the part of the sentence that has an error. If the sentence has no error, select the option 'No Error'.

Rail services is out of/ question because of their/ initial high capital cost.

- Ans  1. initial high capital cost.  
 2. Rail services is out of  
 3. No Error  
 4. question because of their

Question ID : 71939920077

Q.15 The sentence below has been divided into three parts. Select the part of the sentence that has an error. If the sentence has no error, select the option 'No Error'.

Further study and experimentation/ indicated that acids release/ hydrogen ions to water solution.

- Ans  1. hydrogen ions to water solution  
 2. indicated that acids release  
 3. No Error  
 4. Further study and experimentation

Question ID : 71939920078

**Comprehension:**

Read the following passage carefully and choose the best answer to each question out of the four alternatives and click the button corresponding to it.

Goa is a state on the south-western coast of India within the region known as the Konkan, separated from the Deccan highlands of the state of Karnataka by the Western Ghats. It is bounded by Maharashtra to the north and Karnataka to the east and south, with the Arabian Sea forming its western coast. It is India's smallest state by area and the fourth-smallest by population. Goa has the highest GDP per capita among all Indian states, two and a half times that of the country. It was ranked the best-placed state by the Eleventh Finance Commission for its infrastructure and ranked on top for the best quality of life in India by the National Commission on Population based on the 12 Indicators. Panaji is the state's capital, while Vasco da Gama is its largest city. The historic city of Margao still exhibits the cultural influence of the Portuguese, who first landed in the early 16th century as merchants and conquered it soon thereafter. Goa is a former Portuguese province; the Portuguese overseas territory of Portuguese India existed for about 450 years until it was annexed by India in 1961.

**SubQuestion No : 16****Q.16 What is the Capital of Goa?**

- Ans
- 1. Margoa
  - 2. Vellore
  - 3. Panaji
  - 4. Konkan

Question ID : 71939920096

**Comprehension:**

Read the following passage carefully and choose the best answer to each question out of the four alternatives and click the button corresponding to it.

Goa is a state on the south-western coast of India within the region known as the Konkan, separated from the Deccan highlands of the state of Karnataka by the Western Ghats. It is bounded by Maharashtra to the north and Karnataka to the east and south, with the Arabian Sea forming its western coast. It is India's smallest state by area and the fourth-smallest by population. Goa has the highest GDP per capita among all Indian states, two and a half times that of the country. It was ranked the best-placed state by the Eleventh Finance Commission for its infrastructure and ranked on top for the best quality of life in India by the National Commission on Population based on the 12 Indicators. Panaji is the state's capital, while Vasco da Gama is its largest city. The historic city of Margao still exhibits the cultural influence of the Portuguese, who first landed in the early 16th century as merchants and conquered it soon thereafter. Goa is a former Portuguese province; the Portuguese overseas territory of Portuguese India existed for about 450 years until it was annexed by India in 1961.

**SubQuestion No : 17****Q.17 Which city exhibits the cultural influence of the Portuguese?**

- Ans
- 1. Margoa
  - 2. Panaji
  - 3. Vasco da Gama
  - 4. Vellore

Question ID : 71939920097

**Comprehension:**

Read the following passage carefully and choose the best answer to each question out of the four alternatives and click the button corresponding to it.

Goa is a state on the south-western coast of India within the region known as the Konkan, separated from the Deccan highlands of the state of Karnataka by the Western Ghats. It is bounded by Maharashtra to the north and Karnataka to the east and south, with the Arabian Sea forming its western coast. It is India's smallest state by area and the fourth-smallest by population. Goa has the highest GDP per capita among all Indian states, two and a half times that of the country. It was ranked the best-placed state by the Eleventh Finance Commission for its infrastructure and ranked on top for the best quality of life in India by the National Commission on Population based on the 12 Indicators. Panaji is the state's capital, while Vasco da Gama is its largest city. The historic city of Margao still exhibits the cultural influence of the Portuguese, who first landed in the early 16th century as merchants and conquered it soon thereafter. Goa is a former Portuguese province; the Portuguese overseas territory of Portuguese India existed for about 450 years until it was annexed by India in 1961.

**SubQuestion No : 18****Q.18 Goa is bounded by which state in the north?**

Ans

- 1. Karnataka
- 2. Arabian Sea
- 3. Maharashtra
- 4. Tamil Nadu

Question ID : 71939920094

**Comprehension:**

Read the following passage carefully and choose the best answer to each question out of the four alternatives and click the button corresponding to it.

Goa is a state on the south-western coast of India within the region known as the Konkan, separated from the Deccan highlands of the state of Karnataka by the Western Ghats. It is bounded by Maharashtra to the north and Karnataka to the east and south, with the Arabian Sea forming its western coast. It is India's smallest state by area and the fourth-smallest by population. Goa has the highest GDP per capita among all Indian states, two and a half times that of the country. It was ranked the best-placed state by the Eleventh Finance Commission for its infrastructure and ranked on top for the best quality of life in India by the National Commission on Population based on the 12 Indicators. Panaji is the state's capital, while Vasco da Gama is its largest city. The historic city of Margao still exhibits the cultural influence of the Portuguese, who first landed in the early 16th century as merchants and conquered it soon thereafter. Goa is a former Portuguese province; the Portuguese overseas territory of Portuguese India existed for about 450 years until it was annexed by India in 1961.

**SubQuestion No : 19****Q.19 Within which region is Goa located?**

- Ans
- 1. Hooghly
  - 2. Eastern
  - 3. Konkan
  - 4. Malabar

Question ID : 71939920093

**Comprehension:**

Read the following passage carefully and choose the best answer to each question out of the four alternatives and click the button corresponding to it.

Goa is a state on the south-western coast of India within the region known as the Konkan, separated from the Deccan highlands of the state of Karnataka by the Western Ghats. It is bounded by Maharashtra to the north and Karnataka to the east and south, with the Arabian Sea forming its western coast. It is India's smallest state by area and the fourth-smallest by population. Goa has the highest GDP per capita among all Indian states, two and a half times that of the country. It was ranked the best-placed state by the Eleventh Finance Commission for its infrastructure and ranked on top for the best quality of life in India by the National Commission on Population based on the 12 Indicators. Panaji is the state's capital, while Vasco da Gama is its largest city. The historic city of Margao still exhibits the cultural influence of the Portuguese, who first landed in the early 16th century as merchants and conquered it soon thereafter. Goa is a former Portuguese province; the Portuguese overseas territory of Portuguese India existed for about 450 years until it was annexed by India in 1961.

**SubQuestion No : 20****Q.20 Which of the following statements about Goa is correct?**

- Ans
- 1. It is the fourth smallest by population
  - 2. none of the above
  - 3. Its is the largest state by area
  - 4. It is bounded by Maharashtra to the South

Question ID : 71939920095

Section : General Hindi

**Q.1 निम्नलिखित प्रश्न में, चार विकल्पों में से, उस विकल्प का चयन करें जो विराम चिह्न युक्त वाक्य का सही विकल्प हो।**

- Ans
- 1. क्या करता क्या न करना कल भी समाना में नहीं आ रहा था।

2. क्या करता क्या न करता कुछ भी समझ में नहीं आ रहा था
3. क्या करता? क्या न करता? कुछ भी समझ में नहीं आ रहा था।
4. क्या करता, क्या न करता, कुछ भी समझ में नहीं आ रहा था।

Question ID : 71939920112

Q.2 निम्नलिखित प्रश्न में, चार विकल्पों में से, उस सही विकल्प का चयन करें जो वाक्यांशों के लिए एक शब्द का विकल्प हो।

साथ काम करने वाला

- Ans  1. सहपाठी
2. सर्वज्ञ
3. सहचर
4. सहकर्मी

Question ID : 71939920104

Q.3 निम्नलिखित प्रश्न में, चार विकल्पों में से, उस विकल्प का चयन करें जो रिक्त स्थान के लिए उपयुक्त शब्द का सही विकल्प है।

शीलयुक्त व्यवहार प्रत्येक व्यक्ति के लिए \_\_\_\_\_ है।

- Ans  1. दुरुपयोगी
2. अहितकर
3. हितकर
4. अनुपयोगी

Question ID : 71939920101

Q.4 निम्नलिखित प्रश्न में, चार विकल्पों में से, उस विकल्प का चयन करें जो समानार्थी शब्द का सही विकल्प नहीं है।

किनारा

- Ans  1. तीर
2. कूल
3. कगार
4. अमी

Question ID : 71939920103

Q.5 निम्नलिखित प्रश्न में, चार विकल्पों में से, उस विकल्प का चयन करें जो उपसर्ग से बना है।

- Ans  1. महँगाई
2. अपवाद
3. आयोजक
4. आंतरिक

Question ID : 71939920098

Q.6 निम्नलिखित प्रश्न में, चार विकल्पों में से, उस विकल्प का चयन करें जो दिए गए शब्द के लिए बहुवचन शब्द का सबसे अच्छा विकल्प है।

धातु

- Ans  1. धातुएँ
2. धातुओ
3. धातुयें

✗ 4. धातूये

Question ID : 71939920106

Q.7 निम्नलिखित प्रश्न में, चार विकल्पों में से, उस विकल्प का चयन करें जो दिए गए मुहावरे का सही अर्थ वाला विकल्प है।

खटाई में पड़ना

- Ans
- ✗ 1. खट्टा होना
  - ✗ 2. नष्ट-भ्रष्ट कर देना
  - ✗ 3. बहुत दुखी होना
  - ✓ 4. काम में अड़चन आना

Question ID : 71939920109

Q.8 निम्नलिखित प्रश्न में, चार विकल्पों में से, उस विकल्प का चयन करें जो विलोम शब्द का सबसे अच्छा विकल्प है।

कनिष्ठ

- Ans
- ✗ 1. आस्था
  - ✓ 2. वरिष्ठ
  - ✗ 3. कृतज्ञ
  - ✗ 4. कंजूस

Question ID : 71939920102

Q.9 निम्नलिखित प्रश्न में, चार विकल्पों में से, उस सही विकल्प का चयन करें जो प्रत्यय से बना शब्द है।

- Ans
- ✗ 1. प्रतिशत
  - ✗ 2. नासमझ
  - ✓ 3. सख्ती
  - ✗ 4. विश्राम

Question ID : 71939920099

Q.10 निम्नलिखित प्रश्न में, चार विकल्पों में से, उस विकल्प का चयन करें जो दिए गए संधि-विच्छेद की संधि का सही विकल्प हो।

राम + ईश्वर

- Ans
- ✗ 1. रामैश्वर
  - ✗ 2. रामिश्वर
  - ✗ 3. रामश्वर
  - ✓ 4. रामेश्वर

Question ID : 71939920100

Q.11 निम्नलिखित प्रश्न में, चार विकल्पों में से, उस विकल्प का चयन करें जो सही वाक्य भेद का विकल्प हो।

कुछ लोग इसलिए दान करते हैं, कि उनका नाम हो।

- Ans
- ✗ 1. निषेधवाचक वाक्य
  - ✗ 2. सरल वाक्य
  - ✗ 3. संयुक्त वाक्य
  - ✓ 4. मिश्र वाक्य

Question ID : 71939920108

Q.12 निम्नलिखित प्रश्न में, चार विकल्पों में से, उस विकल्प का चयन करें जो दिए गए शब्द का सही स्त्रीलिंग वाला शब्द है।

संन्यासी

- Ans
- 1. संन्यसीनी
  - 2. संन्यसिरिन
  - 3. संन्यासिनी
  - 4. संन्याशिनी

Question ID : 71939920105

Q.13 निम्न विकल्पों में से निर्देशानुसार वाच्य परिवर्तन का विकल्प चुनिए।

मैं साइकिल से विद्यालय गया। (कर्मवाच्य)

- Ans
- 1. विद्यालय साइकिल से मेरे द्वारा जाया गया।
  - 2. मेरे द्वारा साइकिल से विद्यालय जाया गया।
  - 3. साइकिल से मैं विद्यालय गया।
  - 4. विद्यालय मैं साइकिल से गया।

Question ID : 71939920107

Q.14 निम्नलिखित प्रश्न में, चार विकल्पों में से, उस विकल्प का चयन करें जो दिए गए मुहावरे का सही अर्थ वाला विकल्प है।

अपने पैरों पर खड़ा होना

- Ans
- 1. अपने सहारे अपना कार्य करना
  - 2. सबसे अलग रहना
  - 3. होश आना
  - 4. हाथ-पैर सही होना

Question ID : 71939920110

Q.15 निम्नलिखित प्रश्न में, चार विकल्पों में से, उस विकल्प का चयन करें जो दिए गए वाक्यांश के लिए सही लोकोक्ति वाला विकल्प है।

अढ़ाई हाथ की ककड़ी, नौ हाथ का बीज

- Ans
- 1. अनहोनी बात
  - 2. अपनी परिस्थिति से संतुष्ट रहना
  - 3. बहुत बोलना
  - 4. अवगुण बताना

Question ID : 71939920111

**Comprehension:**

नीचे दिए गये गद्यांश को ध्यानपूर्वक पढ़ें और चार विकल्पों में से प्रत्येक प्रश्न का सर्वोत्तम उत्तर चुनें।

वह माह नवम्बर की शुरुआत थी और टॉम कैनेडी भी अन्य अफसरों की तरह से शरदकालीन लम्बे दौर पर विविध पुलिस स्टेशनों के निरीक्षण हेतु बाहर था। सर्दी के दिनों में कैप का जीवन एक लम्बे पिकनिक के सामान हुआ करता था। भारत की कष्टदायक गर्मियों के बाद इन दिनों की ताज़गी आनन्दवर्धक होती थी, परंतु कर्त्तव्य की कभी अवहेलना नहीं होती थी, क्योंकि अपने अधीनस्थ पदाधिकारियों के कार्यों और गतिविधियों के निरीक्षण के अतिरिक्त सुपरिटेण्डेंट से अपेक्षा की जाती थी कि वह पूरे जिले की स्थिति की वाकफियत हासिल करे, विशेषकर ग्रामीण क्षेत्रों में पनपने वाले क्राइम की। उसको इस दौर के मध्य शिकार के उत्तम अवसर मिला करते थे। येलोपुर में चूँके कुछ अच्छे जंगल थे। अतः कैनेडी यहाँ बेहतर शिकार की आशा में आया था।

SubQuestion No : 16

Q.16 इस अनुच्छेद का कोई उपयुक्त शीर्षक:

- Ans
- 1. निरीक्षण का कार्य
  - 2. शरदकालीन दौरे का प्रज्ञा



3. कर्तव्य
4. शिकार का आनंद

Question ID : 71939920118

**Comprehension:**

नीचे दिए गये गद्यांश को ध्यानपूर्वक पढ़ें और चार विकल्पों में से प्रत्येक प्रश्न का सर्वोत्तम उत्तर चुनें।

वह माह नवम्बर की शुरुआत थी और टॉम कैनेडी भी अन्य अफसरों की तरह से शरदकालीन लम्बे दौरे पर विविध पुलिस स्टेशनों के निरीक्षण हेतु बाहर था। सर्दी के दिनों में कैप का जीवन एक लम्बे पिकनिक के सामान हुआ करता था। भारत की कष्टदायक गर्मियों के बाद इन दिनों की ताज़गी आनंदवर्धक होती थी, परंतु कर्तव्य की कभी अवहेलना नहीं होती थी, क्योंकि अपने अधीनस्थ पदाधिकारियों के कार्यों और गतिविधियों के निरीक्षण के अतिरिक्त सुपरिटेण्डेंट से अपेक्षा की जाती थी कि वह पूरे जिले की स्थिति की वाकफियत हासिल करे, विशेषकर ग्रामीण क्षेत्रों में पनपने वाले क्राइम की। उसको इस दौरे के मध्य शिकार के उत्तम अवसर मिला करते थे। येलोपुर में चूँके कुछ अच्छे जंगल थे। अतः कैनेडी यहाँ बेहतर शिकार की आशा में आया था।

**SubQuestion No : 17**

Q.17 कैनेडी किस आशा में आए थे?

- Ans  1. अच्छे शिकार की
2. बहुत क्राइम की
3. आराम के
4. बहुत काम के

Question ID : 71939920116

**Comprehension:**

नीचे दिए गये गद्यांश को ध्यानपूर्वक पढ़ें और चार विकल्पों में से प्रत्येक प्रश्न का सर्वोत्तम उत्तर चुनें।

वह माह नवम्बर की शुरुआत थी और टॉम कैनेडी भी अन्य अफसरों की तरह से शरदकालीन लम्बे दौरे पर विविध पुलिस स्टेशनों के निरीक्षण हेतु बाहर था। सर्दी के दिनों में कैप का जीवन एक लम्बे पिकनिक के सामान हुआ करता था। भारत की कष्टदायक गर्मियों के बाद इन दिनों की ताज़गी आनंदवर्धक होती थी, परंतु कर्तव्य की कभी अवहेलना नहीं होती थी, क्योंकि अपने अधीनस्थ पदाधिकारियों के कार्यों और गतिविधियों के निरीक्षण के अतिरिक्त सुपरिटेण्डेंट से अपेक्षा की जाती थी कि वह पूरे जिले की स्थिति की वाकफियत हासिल करे, विशेषकर ग्रामीण क्षेत्रों में पनपने वाले क्राइम की। उसको इस दौरे के मध्य शिकार के उत्तम अवसर मिला करते थे। येलोपुर में चूँके कुछ अच्छे जंगल थे। अतः कैनेडी यहाँ बेहतर शिकार की आशा में आया था।

**SubQuestion No : 18**

Q.18 टॉम कैनेडी बाहर क्यों था?

- Ans  1. खान-पान हेतु
2. निरीक्षण हेतु
3. पिकनिक के लिए
4. मौसम के मज़े के लिए

Question ID : 71939920114

**Comprehension:**

नीचे दिए गये गद्यांश को ध्यानपूर्वक पढ़ें और चार विकल्पों में से प्रत्येक प्रश्न का सर्वोत्तम उत्तर चुनें।

वह माह नवम्बर की शुरुआत थी और टॉम कैनेडी भी अन्य अफसरों की तरह से शरदकालीन लम्बे दौरे पर विविध पुलिस स्टेशनों के निरीक्षण हेतु बाहर था। सर्दी के दिनों में कैप का जीवन एक लम्बे पिकनिक के सामान हुआ करता था। भारत की कष्टदायक गर्मियों के बाद इन दिनों की ताज़गी आनंदवर्धक होती थी, परंतु कर्तव्य की कभी अवहेलना नहीं होती थी, क्योंकि अपने अधीनस्थ पदाधिकारियों के कार्यों और गतिविधियों के निरीक्षण के अतिरिक्त सुपरिटेण्डेंट से अपेक्षा की जाती थी कि वह पूरे जिले की स्थिति की वाकफियत हासिल करे, विशेषकर ग्रामीण क्षेत्रों में पनपने वाले क्राइम की। उसको इस दौरे के मध्य शिकार के उत्तम अवसर मिला करते थे। येलोपुर में चूँके कुछ अच्छे जंगल थे। अतः कैनेडी यहाँ बेहतर शिकार की आशा में आया था।

**SubQuestion No : 19**

Q.19 इनमें से कौन-सा 'हासिल' शब्द का पर्यायवाची नहीं है?

- Ans  1. उपलब्धि
2. प्राप्त
3. लब्ध

✓ 4. गँवाना

Question ID : 71939920117

**Comprehension:**

नीचे दिए गये गद्यांश को ध्यानपूर्वक पढ़ें और चार विकल्पों में से प्रत्येक प्रश्न का सर्वोत्तम उत्तर चुनें।

वह माह नवम्बर की शुरुआत थी और टॉम कैनेडी भी अन्य अफसरों की तरह से शरदकालीन लम्बे दौरे पर विविध पुलिस स्टेशनों के निरीक्षण हेतु बाहर था। सर्दी के दिनों में कैप का जीवन एक लम्बे पिकनिक के सामान हुआ करता था। भारत की कष्टदायक गर्मियों के बाद इन दिनों की ताज़गी आनंदवर्धक होती थी, परंतु कर्त्तव्य की कभी अवहेलना नहीं होती थी, क्योंकि अपने अधीनस्थ पदाधिकारियों के कार्यों और गतिविधियों के निरीक्षण के अतिरिक्त सुपरिटेण्डेंट से अपेक्षा की जाती थी कि वह पूरे जिले की स्थिति की वाकफियत हासिल करे, विशेषकर ग्रामीण क्षेत्रों में पनपने वाले क्राइम की। उसको इस दौरे के मध्य शिकार के उत्तम अवसर मिला करते थे। येलोपुर में चूँके कुछ अच्छे जंगल थे। अतः कैनेडी यहाँ बेहतर शिकार की आशा में आया था।

**SubQuestion No : 20**

**Q.20** सर्दी के दिनों में कैप टॉम कैनेडी को अच्छे क्यों लगा करते थे?

- Ans**
- ✓ 1. पिकनिक के समान होने के कारण
  - ✗ 2. मौसम का आनंद मिलने के कारण
  - ✗ 3. कोई भी काम न होने के कारण
  - ✗ 4. कष्टदायक होने के कारण

Question ID : 71939920115

Section : Discipline1

**Q.1** \_\_\_\_\_ deficiency (VAD) causes blindness and renders children susceptible to common childhood killers: measles, diarrhoea, malaria and pneumonia.

- Ans**
- ✗ 1. Proteins
  - ✗ 2. Calcium
  - ✓ 3. Vitamin A
  - ✗ 4. Vitamin K

Question ID : 71939920136

**Q.2** At what age should caregivers provide opportunities to children to listen and articulate short stories and rhymes, indulge in imaginative play and simple problem solving activities?

- Ans**
- ✗ 1. 9 months to 12 months
  - ✗ 2. 1 year to 2 years
  - ✗ 3. 2.5 years to 4 years
  - ✓ 4. 2 years to 3 years

Question ID : 71939920130

**Q.3** According to UNICEF, early childhood is defined as the period from conception through \_\_\_\_\_ years of age.

- Ans**
- ✗ 1. seven
  - ✗ 2. six
  - ✓ 3. eight
  - ✗ 4. ten

Question ID : 71939920119

**Q.4** Children who have experienced violence \_\_\_\_\_ exhibit health and behavioural problems.

**Ans**

- 1. are less likely to
- 2. always
- 3. never
- 4. are more likely to

Question ID : 71939920133

**Q.5 At what age do children gain control of hands and fingers?**

- Ans
- 1. 2 years to 3 years
  - 2. 9 months to 12 months
  - 3. 1 year to 2 years
  - 4. 12 months to 18 months

Question ID : 71939920137

**Q.6 Children belonging to which age group need opportunities for exploration and for playing alone and with other children?**

- Ans
- 1. Birth to 3 months
  - 2. 4 months to 6 months
  - 3. 1 year to 2 years
  - 4. 7 months to 1 year

Question ID : 71939920138

**Q.7 Which programme is a centrally sponsored and state administered ECCE programme, covering more than 37 million children through a network of around 1.4 million anganwadi centres?**

- Ans
- 1. The National Social Assistance Programme (NSAP)
  - 2. The Integrated Child Development Services (ICDS) programme
  - 3. Sarva Shiksha Abhiyan (SSA)
  - 4. Development of women and children in Rural Areas (DWCRA)

Question ID : 71939920124

**Q.8 The Early Childhood Care and Education Programme recognise that children learn best through play and \_\_\_\_\_.**

- Ans
- 1. learning by doing
  - 2. rote learning
  - 3. learning by showing
  - 4. learning by teaching

Question ID : 71939920121

**Q.9 Which ministry is the nodal department for Early childhood care and Education (ECCE)?**

- Ans
- 1. The Ministry of Women and Child Development (MWCD)
  - 2. The Human Resources Ministry (HRM)
  - 3. The Ministry of Social Welfare (MSW)
  - 4. The Ministry of Education (MOE)

Question ID : 71939920122

**Q.10 Involving children's senses and muscles, \_\_\_\_\_ satisfies children's need to be active and to exp**

- Ans
- 1. Games with Rules
  - 2. Functional Play
  - 3. Pretend Play
  - 4. Constructive Play

Question ID : 71939920134

Q.11 \_\_\_\_\_ refers to the unique and enduring bond between the primary caregiver and child, they are special to each other for the rest of their lives.

- Ans
- 1. Cooperation
  - 2. Attachment
  - 3. Interdependence
  - 4. Transaction

Question ID : 71939920126

Q.12 The human brain grows at a rapid pace after birth and reaches \_\_\_\_\_ percent of its adult weight by the time the child is 2 years old.

- Ans
- 1. 95
  - 2. 75
  - 3. 55
  - 4. 85

Question ID : 71939920135

Q.13 Children belonging to which age group display development of skills in sorting and classification according to one or two attributes, seriation, pattern identification, pattern making, reasoning and problem solving?

- Ans
- 1. 5 years to 6 years
  - 2. 3 years to 4 years
  - 3. 2 years to 4 years
  - 4. 1 years to 3 years

Question ID : 71939920131

Q.14 The attention span of young children (3 to 6 years) is:

- Ans
- 1. 15-20 minutes
  - 2. 45-50 minutes
  - 3. 35-40 minutes
  - 4. 25-30 minutes

Question ID : 71939920128

Q.15 According to the Early Childhood Care and Education (ECCE) Curriculum Framework, Early Childhood Care and Education (ECCE) encompass which of the following elements within a protective and enabling environment?

1. Care
2. Health
3. Nutrition
4. Play
5. Insurance
6. Early learning

- Ans
- 1. Only 1, 2, 3, 4 and 6
  - 2. Only 1, 2, 3, 5 and 6
  - 3. Only 1, 2, 3, 4 and 5

4. Only 1, 3 and 4

Question ID : 71939920125

Q.16 \_\_\_\_\_ refers to the development of intelligence of children enables them to explore their environment and the need to know what surrounds them, how it works, and how it feels.

- Ans
- 1. Exploratory age
  - 2. Questioning age
  - 3. Experimental age
  - 4. Interactive age

Question ID : 71939920132

Q.17 A child belonging to which age group will be able to name body parts and other common objects in and around her environment?

- Ans
- 1. 6 to 8 years
  - 2. 2 to 3 years
  - 3. 1 to 2 years
  - 4. 3 to 5 years

Question ID : 71939920129

Q.18 Which one of these caters to all children under 6 years of age and commits to universal access to quality early childhood education?

- Ans
- 1. The National Policy on Education
  - 2. Education for All (EFA)
  - 3. The Right of Children to Free and Compulsory Education (RTE) Act 2010
  - 4. The National Early Childhood Care and Education (ECCE) Policy of 2013

Question ID : 71939920123

Q.19 Which statement is correct?

1. Early Childhood Education is not recognized as a compulsory provision by Right To Education in India.

2. Right To Education urges states to provide free pre-school education for children above three years.

- Ans
- 1. Both the statements are wrong.
  - 2. Only statement 2 is correct; statement 1 is wrong.
  - 3. Both the statements are correct.
  - 4. Only statement 1 is correct; statement 2 is wrong.

Question ID : 71939920120

Q.20 Children should be encouraged to be proficient:

- Ans
- 1. in their mother tongue or home language first
  - 2. in the formal school language first
  - 3. any language - either their mother tongue or the formal school language but never English
  - 4. either formal school language or English

Question ID : 71939920127

## Section : Discipline2

Q.1 Children are curious and have a/an \_\_\_\_\_ desire to learn.

- Ans
- 1. educational
  - 2. innate
  - 3. cultural
  - 4. social

Question ID : 71939920142

Q.2 According to a principle of early childhood curriculum, changes or development in one domain \_\_\_\_\_ the development of another domain.

- Ans
- 1. always hinders
  - 2. facilitates or hinders
  - 3. mostly facilitates but rarely hinders
  - 4. mostly hinders but rarely facilitates

Question ID : 71939920143

Q.3 Children belonging to which age group should display onset of babbling, that is, repetitive strings of speech-like syllables like "baba" and "deedee"?

- Ans
- 1. 12 months to 24 months
  - 2. 7 to 11 months
  - 3. 24 months to 36 months
  - 4. 1 month to 6 months

Question ID : 71939920158

Q.4 \_\_\_\_\_ is a system of symbols that is used to communicate.

- Ans
- 1. Mathematics
  - 2. Language
  - 3. Dialogue
  - 4. A book

Question ID : 71939920155

Q.5 Mihir is teaching his grade 1 students to identify shapes of everyday objects such as circular wheels and rectangular doors. This activity would help these children in the development which one of the following?

- Ans
- 1. Language concepts
  - 2. Geographic concepts
  - 3. Scientific concepts
  - 4. Mathematical concepts

Question ID : 71939920149

Q.6 The brain region that controls the understanding and cognitive processing of language is known as:

- Ans
- 1. Broca's area
  - 2. Wernicke's area
  - 3. Sylvian fissure
  - 4. Broadmann area

Question ID : 71939920157

**Q.7** A kindergarten teacher is teaching her students to describe their physical world with directional words: in front of, behind, on top of, next to, below etc. Which major math concept is being taught through this exercise?

- Ans
- 1. Arithmetic
  - 2. Number system
  - 3. Geometry
  - 4. Measurement & Data Interpretation

Question ID : 71939920147

**Q.8** During the early years of life, children move from sensory or behavioural responses to:

- Ans
- 1. symbolic or representational knowledge
  - 2. concrete learning
  - 3. inductive logic
  - 4. didactic learning

Question ID : 71939920144

**Q.9** Child development and learning are characterized by:

- Ans
- 1. uniform development in all children
  - 2. regional and racial differences
  - 3. standard pace of learning among all children
  - 4. individual variation

Question ID : 71939920141

**Q.10** \_\_\_\_\_ is an exercise that will reinforce children's learning in the field of data interpretation.

- Ans
- 1. Comparing different objects using appropriate language
  - 2. Touching different objects and counting out loud
  - 3. Drawing pictures about taking things away from a collection
  - 4. Counting the different number of sides of objects

Question ID : 71939920151

**Q.11** Ranjeet helps his mother in the kitchen by measuring ingredients when cooking. This activity is most likely to strengthen Ranjeet's \_\_\_\_\_.

- Ans
- 1. reasoning skills
  - 2. mathematical concepts
  - 3. literary skills
  - 4. geographic concepts

Question ID : 71939920148

**Q.12** Which one of the following is an objective of the Early Childhood Care and Education programme?

- Ans
- 1. Enable each child to pursue the higher education of their choice
  - 2. Enhance development of competitiveness, excellence and patriotism in every child
  - 3. Prepare each child for a competitive sport of his/her choice
  - 4. Enable a sound foundation for physical and motor development of each child- as per each child's potential



Question ID : 71939920146

Q.13 Which of the following are considered as the building blocks for literacy - the ability to:

1. speak
2. listen
3. sing
4. draw
5. understand

- Ans  1. Only 1, 2, 4 and 5
2. Only 2, 3, 4 and 5
3. Only 1, 2, 3 and 4
4. Only 1, 2, 3 and 5

Question ID : 71939920156

Q.14 \_\_\_\_\_ plays an important role in communication, exchange of information, development of reading skills, reading with comprehension, and, in later years, academic success.

- Ans  1. Music
2. Geography
3. Language
4. Mathematics

Question ID : 71939920154

Q.15 During which period are peer social skills effectively developed among children?

- Ans  1. during 1-2 years of life
2. during 7-9 years of life
3. during 9-11 years of life
4. during 3-5 years of life

Question ID : 71939920145

Q.16 The optimal period for oral language development in children is:

- Ans  1. from age 2 to 8
2. from age 3 to 6
3. in the first three years of life
4. during the first year of life

Question ID : 71939920140

Q.17 In \_\_\_\_\_, children learn use of different materials, put things together based on a plan, develop and use strategies of reaching their goal.

- Ans  1. Games with Rules
2. Constructive Play
3. Pretend Play
4. Functional Play

Question ID : 71939920139

Q.18 Which one of the following skills will help develop mathematical concepts in children?

- Ans  1. vocabulary

- 2. seriation
- 3. storytelling
- 4. phonetics

Question ID : 71939920150

**Q.19 Which one of the following is an exercise that will reinforce children's learning of cardinal and ordinal numbers?**

- Ans
- 1. The relative position of students in a sack race
  - 2. The number of faces or sides that things kept in a room have
  - 3. The number of birds sitting on the branch now and five minutes ago
  - 4. The distance travelled and time taken by Kunal to commute from his home and school

Question ID : 71939920152

**Q.20 Which activity that Garima does with her 5-year-old daughter will help the child develop mathematical concepts?**

- Ans
- 1. Sowing seeds in the kitchen garden
  - 2. Reading picture books aloud
  - 3. Drawing pictures of fruits and vegetables
  - 4. Counting the number of items bought from a grocery shop

Question ID : 71939920153

Section : Discipline3

**Q.1 Which one of these is an advantage of teacher observing teacher or teaching observations method?**

- Ans
- 1. The data collected through teaching observations is frequently unreliable.
  - 2. It creates a pressure on teachers to perform better during observations hence the focus is on very few topics.
  - 3. It creates a hierarchy in the organization which can be used by the management for promotion-related decisions.
  - 4. It helps the observed teacher and the observer teachers to continuously develop and improve their practice.

Question ID : 71939920175

**Q.2 Any preschool care and education centre should have adequate and varied supply of play equipment and materials which is:**

- Ans
- 1. donated by the parents and the community
  - 2. cheap and economical
  - 3. developmentally and age appropriate
  - 4. easily available in the market

Question ID : 71939920174

**Q.3 How can a teacher struggling with classroom management improve his skills by participating in teacher observation?**

- Ans
- 1. He can observe a peer in a safe and inclusive learning environment and understand how to handle behaviour problems, as well as opportunities, in the classroom.
  - 2. He can use the time to search on the Internet ways to handle classroom management better.

3. He can use the opportunity to hinder the classroom progress and show that he is not the only one who struggles with classroom management.
4. He can directly ask the principal to appoint a co-teacher to help him better manage the classroom.

Question ID : 71939920177

**Q.4 Which one of the following is NOT true about Early Childhood Care Education in India?**

- Ans**  1. It is a programme which indirectly promotes self control and thereby inner discipline in children through interactions.
2. It is a programme to conduct tests to know how children are learning and developing.
3. It lays the foundation for the development of reading, writing and number work.
4. It caters to individual children's learning and emotional needs through various activities.

Question ID : 71939920172

**Q.5 \_\_\_\_\_ contributes to the development of representational as well as abstract thought.**

- Ans**  1. Language
2. Play
3. Science
4. Music

Question ID : 71939920161

**Q.6 \_\_\_\_\_ is best developed by providing every child with the opportunity to reach her or his full potential.**

- Ans**  1. Nation's productivity
2. Culture
3. National income
4. Human capital

Question ID : 71939920163

**Q.7 According to developmental pedagogy, language should be learnt by processes in which order?**

1. speak 2. listen 3. write 4. read

- Ans**  1. Listen– speak–read–write
2. Read– write–listen–speak
3. Read–listen–write–speak
4. Speak–read–listen– write

Question ID : 71939920168

**Q.8 Which one of these forms a part of a child's social environment?**

- Ans**  1. festivals
2. water
3. seasons
4. earth

Question ID : 71939920165

**Q.9 Climbers, swings**

movable items are all examples of:

- Ans
- 1. waste material that needs to be thrown
  - 2. Recyclable material
  - 3. Indoor study material
  - 4. Outdoor play material

Question ID : 71939920170

**Q.10 Children belonging to which age group need opportunities to explore, touch, taste, smell and respond to the environment?**

- Ans
- 1. 4 months to 6 months
  - 2. 9 to 18 months
  - 3. Birth to 3 months
  - 4. 7 to 12 months

Question ID : 71939920167

**Q.11 It has to be ensured that the early childhood initiatives for children from age 3 to 6 years reflects responsiveness to:**

1. family and home values
2. social and cultural background
3. their immediate environment
4. the problems that contemporary world faces

- Ans
- 1. Only 1, 2 and 3
  - 2. All 4
  - 3. Only 2, 3 and 4
  - 4. Only 1, 2 and 4

Question ID : 71939920166

**Q.12 Which one of these is an ideal material for outdoor play activities?**

- Ans
- 1. ducks swimming in a pond
  - 2. number of charts on the wall
  - 3. toy animals
  - 4. marbles in a jar

Question ID : 71939920171

**Q.13 Pramod, the observed teacher, is in a post-observation discussion with his peers who are only saying that the class was not as effective as they had expected. What can he say to get a constructive feedback from his peers?**

- Ans
- 1. What is your problem with using a creative and innovative way to teach the young children?
  - 2. Can you all stop criticising me and see how you all teach? Do you know what your students say behind you?
  - 3. How would you feel if everyone in the room started to criticise you? Just wait for my turn!
  - 4. What is the one action that you saw me doing, or failing to do, that made my class 'not as effective' as you expected?

Question ID : 71939920178

**Q.14 Which one of these is NOT an ideal material for indoor play activities?**

- Ans
- 1. stringing beads
  - 2. trees

- 3. stacking cups
- 4. blocks

Question ID : 71939920169

Q.15 What precaution should the observer teachers take during teacher observation?

- Ans
- 1. Be open to alternative viewpoints.
  - 2. Obstruct the class as and when you have a question.
  - 3. Propose to teach the topic yourself if the observed teacher is not doing a good job in your opinion.
  - 4. Criticise the observed teacher openly.

Question ID : 71939920176

Q.16 The society - individuals and institutions, social laws, customs by which human behaviour is regulated, constitute:

- Ans
- 1. Physical environment
  - 2. Social environment
  - 3. Psychological environment
  - 4. Geographical environment

Question ID : 71939920164

Q.17 Which of these is NOT an ideal material for imaginative play or dramatic play material?

- Ans
- 1. puppet
  - 2. old spectacle frames
  - 3. dolls
  - 4. sand pit

Question ID : 71939920173

Q.18 Which is the important milestones in speech development displayed by children aged 4 to 6 years?

- Ans
- 1. babbling, that is, repetitive strings of speech-like syllables
  - 2. implicit awareness of alliteration and rhyme and sounds in words
  - 3. intelligible speech
  - 4. accurate speech sound production

Question ID : 71939920160

Q.19 Phonological disorder involves trouble with:

- Ans
- 1. correct sound production and selection
  - 2. incorrect use of words and tenses, problems forming sentences
  - 3. the timing of sounds and words which impairs overall fluency
  - 4. incorrect use of words and tenses

Question ID : 71939920159

Q.20 A fundamental aspect of early childhood care is that infants and toddlers need \_\_\_\_\_ that give them opportunities to be active using all of their senses.

- Ans
- 1. variable stimulation
  - 2. Science
  - 3. multisensory stimulation

4. stimulative surrounding

Question ID : 71939920162

Section : Discipline4

**Q.1 Early Childhood Care and Education (ECCE) is a:**

- Ans  1. formal 'teaching' programme  
 2. child-centred programme  
 3. teacher-centred programme  
 4. syllabus-bound program

Question ID : 71939920198

**Q.2 When you are being observed by your co-teacher or the supervisor, the focus will often be on:**

- Ans  1. who was making noise in the class.  
 2. how did the children reacted to other teachers being present in the class.  
 3. how many children got up and asked for a loo break during the class.  
 4. how well you carried out the different aspects of the lesson.

Question ID : 71939920179

**Q.3 Observers may not be fully honest with their feedback of teacher observation if they feel that:**

- Ans  1. the observed teacher will surpass them if he works on the feedback.  
 2. sharing constructive feedback will help the observed teacher gain a better standing in school.  
 3. their comments could damage their relationship with a colleague.  
 4. their comments could help a colleague improve his teaching .

Question ID : 71939920180

**Q.4 The defining features of inclusion that can be used to identify high quality early childhood programs and services are:**

- Ans  1. shame and segregate  
 2. access, participation, and supports  
 3. merge, immerse and assimilate  
 4. recognize and reward

Question ID : 71939920192

**Q.5 Early childhood care and Education (ECCE) teachers and caregivers in India are trained to:**

- Ans  1. ignore gender bias in the classroom  
 2. tolerate gender bias in the classroom  
 3. actively keep gender bias out of the classroom  
 4. actively promote gender bias in the classroom

Question ID : 71939920190

**Q.6 It is critical to identify areas of \_\_\_\_\_ of a child with special education needs, and provide means to build upon them.**

- Ans
- 1. weakness
  - 2. inclusion
  - 3. strength
  - 4. problem

Question ID : 71939920195

Q.7 \_\_\_\_\_ means mental processes i.e. learning, memorizing, perceiving and problem solving.

- Ans
- 1. Evaluation
  - 2. Cognition
  - 3. Assessment
  - 4. Training

Question ID : 71939920184

Q.8 The \_\_\_\_\_ of special education needs of children at an early age is crucial to helping them cope with challenges in later life.

- Ans
- 1. evaluation
  - 2. promotion
  - 3. identification
  - 4. segregation

Question ID : 71939920189

Q.9 At around \_\_\_\_\_, babies offer a "social smile," the first social response to others.

- Ans
- 1. 6 months
  - 2. 2 weeks
  - 3. 1 week
  - 4. 2 months

Question ID : 71939920185

Q.10 \_\_\_\_\_ consists of all outer physical surroundings both in-animate and animate which have to be manipulated in order to provide food, clothing and shelter.

- Ans
- 1. Social environment
  - 2. Cultural environment
  - 3. Psychological environment
  - 4. Physical environment

Question ID : 71939920194

Q.11 Who is the author of the book Pedagogies of Kindergarten?

- Ans
- 1. Jean Piaget
  - 2. Gijubhai Badekha
  - 3. Friedrich August Froebel
  - 4. Maria Montessori

Question ID : 71939920197

Q.12 Which one of the following may influence the nature of the lesson, making the lesson untypical of the teacher's usual style of learning?

- Ans
- 1. The time



- 2. The number of students attending the class
- 3. The relative seniority of the observed and the observer teacher
- 4. The presence of a teacher in the classroom

Question ID : 71939920181

Q.13 The Early Childhood Care and Education (ECCE) classroom arrangement must be \_\_\_\_\_ so that it can be adjusted to lesson plans and activities, such as large groups for singing, storytelling and smaller groups for activities like drawing.

- Ans
- 1. rigid
  - 2. immutable
  - 3. flexible
  - 4. fixed

Question ID : 71939920196

Q.14 Who among the following proposed that children represent information and knowledge in their memory in three different but interrelated modes such as action-based, image based and language/symbol based?

- Ans
- 1. Piaget
  - 2. Jerome Bruner
  - 3. Vygotsky
  - 4. Urie Bronfenbrenner

Question ID : 71939920186

Q.15 Early \_\_\_\_\_ starts at birth and is a process of learning socio-cultural roles according to one's gender.

- Ans
- 1. social differentiation
  - 2. gender sensitisation
  - 3. social division
  - 4. gender socialization

Question ID : 71939920191

Q.16 \_\_\_\_\_ proposed the theory of insightful learning.

- Ans
- 1. Erik Erikson
  - 2. Wolfgang Köhler
  - 3. Ivan Pavlov
  - 4. Edward Tolman

Question ID : 71939920187

Q.17 A young child who is regularly left out, teased, or bullied by same-age or older peers can develop:

- Ans
- 1. high self-esteem
  - 2. fake self confidence
  - 3. low self-esteem
  - 4. tolerance mechanism

Question ID : 71939920188

Q.18 Malnourished children:

1. score more poorly on tests of cognitive function
2. have poor psychomotor development
3. have lower activity levels
4. interact more frequently in their environments
5. acquire skills at normal rates

- Ans
- 1. Only 2, 3 and 4
  - 2. Only 2, 3 and 5
  - 3. Only 1, 2 and 3
  - 4. Only 1, 2 and 4

Question ID : 71939920193

Q.19 According to Erik Erikson's Stages of Psychosocial Development, which basic virtues is acquired during the pre-adolescent years upon successful completion of the stage?

- Ans
- 1. Purpose
  - 2. Fidelity
  - 3. Competency
  - 4. Wisdom

Question ID : 71939920183

Q.20 According to Jean Piaget's 1st stage of cognitive development:

- Ans
- 1. Child can reason by forming Hypothesis
  - 2. Child begins to develop reflexes and hand-eye coordination
  - 3. Child leaves to classify objects according to common properties
  - 4. Children learn through imitation and play

Question ID : 71939920182

Section : Discipline5

Q.1 The massive, ongoing, informal curriculum of family, peer groups, neighbourhoods, churches, organizations, occupations, mass media, and other socializing forces that "educate" all of us throughout our lives is known as:

- Ans
- 1. Societal curriculum
  - 2. Covert Curriculum
  - 3. Phantom Curriculum
  - 4. Overt Curriculum

Question ID : 71939920199

Q.2 \_\_\_\_\_ of the Convention on the Rights of the Child establishes the child's right to education.

- Ans
- 1. Article 29
  - 2. Article 3
  - 3. Article 101
  - 4. Article 21

Question ID : 71939920209

Q.3 The duration of the Early Childhood Care and Education (ECCE) programme should be:

- Ans
- 1. 2 hours
  - 2. 8 hours

3. 6 hours

4. 4 hours

Question ID : 71939920201

Q.4 \_\_\_\_\_ involves information being structured so that complex ideas can be taught at a simplified level first where children learn more through concrete experiences, and then re-visited at more complex levels later on.

Ans  1. Spiral curriculum

2. Phantom Curriculum

3. Hidden Curriculum

4. Overt Curriculum

Question ID : 71939920200

Q.5 \_\_\_\_\_ helps in bringing relevant local and family culture to the care environment, which helps young children transition from home to the care setting.

Ans  1. Working with community workers

2. Working with social self-help groups

3. Involving local leaders

4. Involving parents

Question ID : 71939920211

Q.6 \_\_\_\_\_ is one of the parenting styles identified by Diane Baumrind.

Ans  1. Directional

2. Autocratic

3. Authoritarian

4. Civilized

Question ID : 71939920210

Q.7 The purpose of \_\_\_\_\_ is to give useful information about children's learning and development to the adults providing the programme as also to children and their families.

Ans  1. curriculum

2. circle time

3. education

4. assessment

Question ID : 71939920203

Q.8 In which style of parenting is communication is frequent and appropriate to the child's level of understanding, expectations and goals are high but stated clearly?

Ans  1. Authoritative

2. rewarding

3. Uninvolved

4. Authoritarian

Question ID : 71939920214

Q.9 The Integrated Child Development Services (ICDS) caters to \_\_\_\_\_ and young children below 6 years.

Ans  1. pregnant women, mothers

- 2. children with special needs
- 3. children and women from disadvantaged and BPL families
- 4. teenagers

Question ID : 71939920216

Q.10 \_\_\_\_\_ refers to "a class grouping in which students of different ages and identified age levels are grouped together in a single classroom for the purpose of providing effective instruction."

- Ans
- 1. Inclusive classroom
  - 2. Multi-age grouping
  - 3. Social education
  - 4. Multilingual classroom

Question ID : 71939920202

Q.11 Dyslexia is a \_\_\_\_\_ disorder.

- Ans
- 1. behavioural
  - 2. physical
  - 3. sensory impaired
  - 4. developmental

Question ID : 71939920204

Q.12 A learning disabled student is all of these EXCEPT:

- Ans
- 1. Is capable of comprehending complex concepts
  - 2. Is easily distractible
  - 3. Has poor auditory memory - both short term and long term
  - 4. Has a low tolerance level and a high frustration level

Question ID : 71939920208

Q.13 Who among the following viewed that children are actively engaged in social and cultural experiences and there is active interaction between children and more experienced others in the process of learning and development?

- Ans
- 1. Jean Piaget
  - 2. Jerome Bruner
  - 3. Lev Vygotsky
  - 4. Urie Bronfenbrenner

Question ID : 71939920212

Q.14 \_\_\_\_\_ parents are reasonable and nurturing, and set high, clear expectations.

- Ans
- 1. Authoritarian
  - 2. Uninvolved
  - 3. Authoritative
  - 4. rewarding

Question ID : 71939920217

Q.15 A child who has a high level of curiosity, well-developed imagination, and can remember and retain a great deal of information, is a:

- Ans
- 1. gifted child

- 2. retarded child
- 3. disabled child
- 4. normal child

Question ID : 71939920205

**Q.16 Article 18 of the Convention on the Rights of the Child suggests that states should take all appropriate measures to ensure that children:**

- Ans
- 1. from minority communities receive adequate care and learning opportunities.
  - 2. of working parents have the right to benefit from child-care services and facilities for which they are eligible.
  - 3. of people below the poverty line get free food or food coupons.
  - 4. children receive mid-day meals at school.

Question ID : 71939920215

**Q.17 Early Childhood Care and Education (ECCE) Programme recommends that the parents should:**

- Ans
- 1. encourage formal learning
  - 2. motivate children for competition
  - 3. share and plan their development along with the ECCE teachers and caregivers
  - 4. discourage exploration and experimentation at home

Question ID : 71939920218

**Q.18 Display of children's artwork and projects on the wall performs all the following functions EXCEPT:**

- Ans
- 1. fosters children's self-esteem as they feel their work is valued.
  - 2. Parents also feel proud of their children and take a more active interest in school activities.
  - 3. Reinforces learning among children.
  - 4. Sale of such material can earn the much-needed funds for the school.

Question ID : 71939920213

**Q.19 An Attention Deficit Hyperactive Disorder (ADHD) child:**

- Ans
- 1. is capable of comprehending complex concepts.
  - 2. has difficulty sitting still, paying attention and concentrating on the classwork.
  - 3. has the ability to concentrate on a problem or issue for extended periods of time.
  - 4. is often an independent learner.

Question ID : 71939920206

**Q.20 Which one of these is NOT an appropriate teaching strategy for children with special needs?**

- Ans
- 1. Teach abstract terms and concepts
  - 2. Provide oral instruction
  - 3. Provide concrete objects and events
  - 4. Give lots of specific praise

Question ID : 71939920207



# Latest Sarkari jobs, Govt Exam alerts, Results and Vacancies

- ▶ Latest News and Notification
- ▶ Exam Paper Analysis
- ▶ Topic-wise weightage
- ▶ Previous Year Papers with Answer Key
- ▶ Preparation Strategy & Subject-wise Books

To know more [Click Here](#)



[www.prepp.in](http://www.prepp.in)