



















Practice, Learn and Achieve  
Your Goal with Prepp

# SSC CHSL Exam

Tier I Previous Paper

Simplifying  
Government Exams

 SSC CHSL	 IAS EXAM	 RRB NTPC	 NTSE	 CDS
 SSC CGL	 CBSE UGC NET	 IBPS PO	 NDA	
 SBI PO	 IBPS CLERK	 AFCAT	 SSC JE	 CTET
 CSIR UGC NET	 CAPF	 IBPS RRB		

# Combined Higher Secondary Level Examination 2019 Tier I

Roll Number	
Candidate Name	
Venue Name	
Exam Date	20/10/2020
Exam Time	4:00 PM - 5:00 PM
Subject	CHSL Tier 1

Section : English Language (Basic Knowledge)

Q.1 Given below are four sentences in a jumbled order. Out of the given options pick the one that gives their correct order.

- A. Add the product to your shopping cart.
- B. Select the brand you like.
- C. Enter the card details and buy the product online.
- D. Look for the product you want to purchase.

- Ans
- 1. DACB
  - 2. BCDA
  - 3. ABCD
  - 4. DBAC

Question ID : 8161613454

Status : Answered

Chosen Option : 4

Q.2 Select the correct antonym for the given word.

Formidable

- Ans
- 1. Trivial
  - 2. Dangerous
  - 3. Scary
  - 4. Appalling

Question ID : 8161613459

Status : Answered

Chosen Option : 4

Q.3 Select the most appropriate synonym of the given word.

Delinquent

- Ans
- 1. Charming
  - 2. Despairing
  - 3. Rewarding
  - 4. Offending

Question ID : 8161613466

Status : Answered

Chosen Option : 4

Q.4 Identify the segment which contains a grammatical error.

The old woman in our locality is knowing for her hot temper.

- Ans
- 1. is knowing for
  - 2. In our locality
  - 3. her hot temper
  - 4. The old woman

Question ID : 8161613446

Status : Answered

Chosen Option : 1

Comprehension:

In the following passage some words have been deleted. Fill in the blanks with the help of the alternatives given. Select the most appropriate option for each blank.

The two men bowed to one (1)\_\_\_\_\_ and parted. Tom found himself in a difficult (2)\_\_\_\_\_. He was going to (3)\_\_\_\_\_ three duels in a (4)\_\_\_\_\_ of three hours. "Even if I am killed, it will be a (5)\_\_\_\_\_ death," he thought.

SubQuestion No : 5

Q.5 Select the most appropriate option to fill in the blank no.1

- Ans
- 1. other
  - 2. self
  - 3. another
  - 4. each

Question ID : 8161613449

Status : Answered

Chosen Option : 1

**Comprehension:**

In the following passage some words have been deleted. Fill in the blanks with the help of the alternatives given. Select the most appropriate option for each blank.

The two men bowed to one (1)\_\_\_\_\_ and parted. Tom found himself in a difficult (2)\_\_\_\_\_. He was going to (3)\_\_\_\_\_ three duels in a (4)\_\_\_\_\_ of three hours. "Even if I am killed, it will be a (5)\_\_\_\_\_ death," he thought.

**SubQuestion No : 6**

**Q.6** Select the most appropriate option to fill in the blank no.2

- Ans  1. situation  
 2. relation  
 3. location  
 4. station

Question ID : 8161613450

Status : Answered

Chosen Option : 1

**Comprehension:**

In the following passage some words have been deleted. Fill in the blanks with the help of the alternatives given. Select the most appropriate option for each blank.

The two men bowed to one (1)\_\_\_\_\_ and parted. Tom found himself in a difficult (2)\_\_\_\_\_. He was going to (3)\_\_\_\_\_ three duels in a (4)\_\_\_\_\_ of three hours. "Even if I am killed, it will be a (5)\_\_\_\_\_ death," he thought.

**SubQuestion No : 7**

**Q.7** Select the most appropriate option to fill in the blank no.3

- Ans  1. fight  
 2. participate  
 3. figure  
 4. think

Question ID : 8161613451

Status : Answered

Chosen Option : 1

### Comprehension:

In the following passage some words have been deleted. Fill in the blanks with the help of the alternatives given. Select the most appropriate option for each blank.

The two men bowed to one (1)\_\_\_\_\_ and parted. Tom found himself in a difficult (2)\_\_\_\_\_. He was going to (3)\_\_\_\_\_ three duels in a (4)\_\_\_\_\_ of three hours. "Even if I am killed, it will be a (5)\_\_\_\_\_ death," he thought.

#### SubQuestion No : 8

Q.8 Select the most appropriate option to fill in the blank no.4

- Ans
- 1. time
  - 2. matter
  - 3. place
  - 4. difference

Question ID : 8161613452

Status : Answered

Chosen Option : 1

### Comprehension:

In the following passage some words have been deleted. Fill in the blanks with the help of the alternatives given. Select the most appropriate option for each blank.

The two men bowed to one (1)\_\_\_\_\_ and parted. Tom found himself in a difficult (2)\_\_\_\_\_. He was going to (3)\_\_\_\_\_ three duels in a (4)\_\_\_\_\_ of three hours. "Even if I am killed, it will be a (5)\_\_\_\_\_ death," he thought.

#### SubQuestion No : 9

Q.9 Select the most appropriate option to fill in the blank no.5

- Ans
- 1. curious
  - 2. laborious
  - 3. glorious
  - 4. spurious

Question ID : 8161613453

Status : Answered

Chosen Option : 2

Q.10 Select the most appropriate synonym of the given word.

### Prodigious

- Ans
- 1. Unimportant
  - 2. Exciting
  - 3. Proud
  - 4. Immense

Question ID : 8161613467

Status : Not Answered

Q.11 Select the most appropriate word to fill in the blank.

The yoga instructor was \_\_\_\_\_ at the student's flexibility.

- Ans
- 1. ridiculed
  - 2. amazed
  - 3. angry
  - 4. disturbed

Question ID : 8161613469

Status : Answered

Chosen Option : 2

Q.12 Select the most appropriate word to fill in the blank.

The government enterprises were privatized as they were \_\_\_\_\_ heavy losses on a daily basis.

- Ans
- 1. earning
  - 2. incurring
  - 3. containing
  - 4. demanding

Question ID : 8161613468

Status : Answered

Chosen Option : 2

Q.13 Select the wrongly spelt word.

- Ans
- 1. Voracious
  - 2. Video
  - 3. Valour
  - 4. Voluntary

Question ID : 8161613463

Status : Answered

Chosen Option : 1

Q.14 Select the correct antonym for the given word.

Identical

- Ans
- 1. Corresponding
  - 2. Similar
  - 3. Indistinguishable
  - 4. Different

Question ID : 8161613458

Status : Answered

Q.15 Select the most appropriate option to substitute the underlined segment in the given sentence. If there is no need to substitute it, select No improvement.

Tons of sheep were grazing in the field.

- Ans
- 1. A flock of sheep
  - 2. Many sheeps
  - 3. Numerous sheeps
  - 4. No improvement.

Question ID : 8161613457  
Status : Answered  
Chosen Option : 1

Q.16 In the sentence identify the segment which contains the grammatical error.

When Harry come back home, he saw blood everywhere.

- Ans
- 1. blood everywhere
  - 2. he saw
  - 3. When Harry
  - 4. come back home

Question ID : 8161613447  
Status : Answered  
Chosen Option : 4

Q.17 Select the word which means the same as the group of words given.

Something like an opening, particularly one in the body such as a nostril

- Ans
- 1. Orifice
  - 2. Obtuse
  - 3. Obscure
  - 4. Oblique

Question ID : 8161613465  
Status : Answered  
Chosen Option : 1

Q.18 Select the most appropriate meaning of the given idiom.

Flying off the handle

- Ans
- 1. Day dreaming
  - 2. Having lofty ideas
  - 3. Suddenly becoming enraged
  - 4. Flying away, being launched from a handle

Question ID : 8161613461

Status : Answered

Chosen Option : 1

Q.19 Select the most appropriate option to substitute the underlined segment in the given sentence. If there is no need to substitute it, select No improvement.

The Dean said, "You can have neither jam nor butter, but not both."

- Ans
- 1. No improvement.
  - 2. jam and butter
  - 3. no jam or butter
  - 4. either jam or butter

Question ID : 8161613456

Status : Answered

Chosen Option : 4

Q.20 Select the word which means the same as the group of words given.

Something that is extremely unpleasant

- Ans
- 1. Horrendous
  - 2. Heightened
  - 3. Humane
  - 4. Humorous

Question ID : 8161613464

Status : Answered

Chosen Option : 1



Q.21 Select the correct indirect form of the given sentence.

Peter said, "He broke his glasses."

- Ans  1. Peter said that he had broken his glasses.  
 2. Peter said that he is going to break his glasses.  
 3. Peter said that he is breaking his glasses.  
 4. Peter said that he break his glasses.

Question ID : 8161613445

Status : Answered

Chosen Option : 1

Q.22 Select the most appropriate meaning of the given idiom.

To cost an arm and a leg

- Ans  1. Not readily available  
 2. Easily affordable  
 3. Very expensive  
 4. To give away an arm and a leg

Question ID : 8161613460

Status : Answered

Chosen Option : 3

Q.23 Given below are four sentences in a jumbled order. Out of the given options pick the one that gives their correct order.

- A. The police suspected the man to be a thief.  
B. Then the trial began in the court.  
C. He was soon arrested by the police.  
D. The thief was sentenced to two years' imprisonment.

- Ans  1. DCAB  
 2. ACBD  
 3. BCDA  
 4. BACD

Question ID : 8161613455

Status : Answered

Chosen Option : 2

Q.24 Select the wrongly spelt word.

- Ans
- 1. Concussion
  - 2. Conveyance
  - 3. Conviencing
  - 4. Commemorate

Question ID : 8161613462

Status : Answered

Chosen Option : 3

Q.25 Select the correct passive form of the given sentence.

The police arrested the thieves yesterday.

- Ans
- 1. The thieves were arrested yesterday by the police.
  - 2. The thieves have been arrested yesterday by the police.
  - 3. The thieves were being arrested yesterday by the police.
  - 4. The thieves had been arrested yesterday by the police.

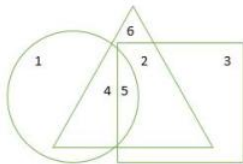
Question ID : 8161613444

Status : Answered

Chosen Option : 1

Section : General Intelligence

Q.1 In the Venn diagram given below, the 'Circle' represents 'boys'; the 'Triangle' represents 'married', and the 'Square' represents 'the persons who own pets'. Then select the area which represents boys who are married but do not own pets?



- Ans
- 1. 2
  - 2. 6
  - 3. 5
  - 4. 4

Question ID : 8161613494

Status : Answered

Chosen Option : 4

Q.2 Select the option in which the words share the same relationship as that shared by the given pair of words.

Chief Justice : President

- Ans
- 1. Corporator : Mayor
  - 2. Chief Minister : Cabinet Minister
  - 3. Chief of Army Staff : Prime Minister
  - 4. Municipal Commissioner : State Government

Question ID : 8161613484

Status : Answered

Chosen Option : 2

Q.3 Select the option that represents the words in a logical sequence.

- Ans
- 1. Peanut – Mouse – Snake – Eagle
  - 2. Mouse – Peanut – Eagle – Snake
  - 3. Mouse – Snake – Peanut – Eagle
  - 4. Eagle – Snake – Peanut – Mouse

Question ID : 8161613477

Status : Answered

Chosen Option : 1

Q.4 Select the option that is related to the third number in the same way as the second number is related to the first number.

36 : 27 :: 16 : ?

- Ans
- 1. 125
  - 2. 64
  - 3. 124
  - 4. 8

Question ID : 8161613472

Status : Answered

Chosen Option : 4

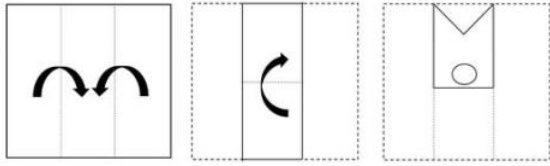
Q.5 In a certain code language, 'salute' is written as 'iuamet'. How will 'mango' be written as in that language?

- Ans
- 1. uhoen
  - 2. phobn
  - 3. uhobn
  - 4. uhpen

Question ID : 8161613478

Status : Answered

Q.6 The sequence of folding a piece of paper and the manner in which the folded paper has been cut is shown in the following figures. How would this paper look when unfolded?



Ans

- 1.
- 2.
- 3.
- 4.

Question ID : 8161613492

Status : Answered

Chosen Option : 3

Q.7 Four letter-clusters have been given, out of which three are alike in some manner and one is different. Select the odd letter-cluster.

CEW , DFU , HJR , KMO

- Ans
- 1. HJR
  - 2. DFU
  - 3. CEW
  - 4. KMO

Question ID : 8161613485

Status : Answered

Chosen Option : 1

Q.8 Select the number that can replace the question mark (?) in the following series.

-13, 16, -20, 25, -31, ?

- Ans
- 1. 48
  - 2. -38
  - 3. 38
  - 4. -48

Question ID : 8161613475

Status : Not Answered

Chosen Option : --

Q.9 Four words have been given below, out of which three are alike in some manner and one is different. Select the odd one.

Kabaddi , Volleyball, Football, Hockey

- Ans
- 1. Volleyball
  - 2. Hockey
  - 3. Kabaddi
  - 4. Football

Question ID : 8161613486

Status : Answered

Chosen Option : 3

Q.10 Four numbers have been given below, out of which three are alike in some manner and one is different. Select the number that is different from the rest.

132, 17523, 3164, 2685

- Ans
- 1. 17523
  - 2. 3164
  - 3. 132
  - 4. 2685

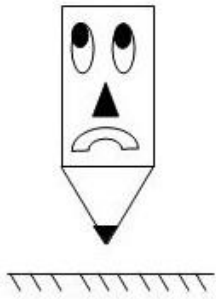
Question ID : 8161613476

Status : Answered



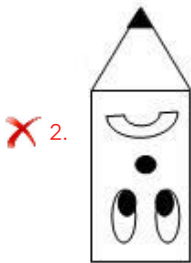

Latest Sarkari Jobs, Govt Exam Results,  
Vacancies and updates on one click

Know More

Q.11 Select the correct mirror image of the given figure from the options .



Ans



Question ID : 8161613493

Status : Answered

Chosen Option : 1

Q.12 In a certain code language, 'Wand' is coded as '240153' and 'Curd' is coded as '420193'. How will 'East' be coded as in that language?

- Ans
- 1. 421821
  - 2. 602019
  - 3. 612120
  - 4. 421719

Question ID : 8161613479

Status : Answered

Chosen Option : 2

Q.13 Select the option in which the numbers are related in the same way as are the numbers in the given set.

(23, 59, 18)

- Ans
- 1. (9, 92, 24)
  - 2. (71, 83, 21)
  - 3. (24, 68, 46)
  - 4. (43, 59, 67)

Question ID : 8161613473

Status : Not Answered

Chosen Option : --

Q.14 Select the combination of letters that when sequentially placed in the blanks of the given letter series will complete the series.

ac\_b\_ac\_\_aa\_d\_a\_cd\_\_

- Ans
- 1. dadbcbaba
  - 2. bcdbcdaba
  - 3. cbdcabada
  - 4. acbdcdabc

Question ID : 8161613482

Status : Answered

Chosen Option : 1

**Q.15** Read the given statements and conclusions carefully. Assuming that the information given in the statements is true, even if it appears to be at variance with commonly known facts, decide which of the given conclusions logically follow(s) from the statements.

**Statements:**

1. All workers are honest.
2. Few of my friends are workers.
3. All my friends are honest.

**Conclusions:**

- I. All my friends are workers.
- II. All workers are my friends.
- III. All my non-worker friends are honest.

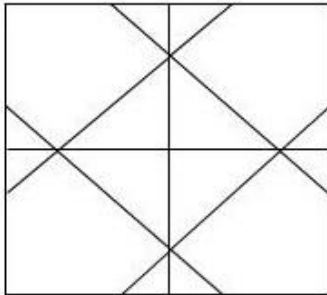
- Ans  1. Only conclusion III follows.  
 2. Only conclusions I and III follow.  
 3. Only conclusions I and II follow.  
 4. Only conclusion II follows.

Question ID : 8161613487

Status : Answered

Chosen Option : 3

**Q.16** How many triangles are there in the given figure?



- Ans  1. 28  
 2. 16  
 3. 20  
 4. 24

Question ID : 8161613490

Status : Answered

Chosen Option : 4



Q.17 If '+' means 'multiplication', '×' means 'division', '÷' means 'subtraction', and '-' means 'addition', then find the value of the following expression.

$$48 \div 12 \times 3 - 6 + 3$$

- Ans
- 1. 150
  - 2. 30
  - 3. 9
  - 4. 62

Question ID : 8161613471

Status : Answered

Chosen Option : 4

Q.18 Select the option that is related to the third letter-cluster in the same way as the second letter-cluster is related to the first letter-cluster.

CDE : XWV :: HIJ : ?

- Ans
- 1. SRQ
  - 2. QRS
  - 3. PON
  - 4. NOP

Question ID : 8161613480

Status : Answered

Chosen Option : 1

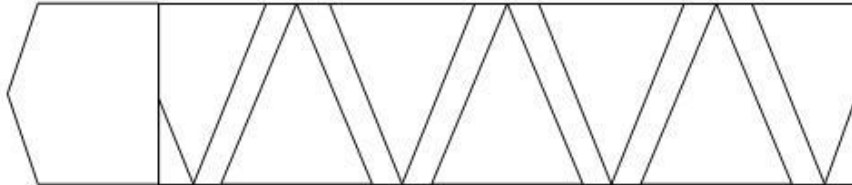
Q.19 Select the option in which the given figure is embedded. (Rotation is not allowed)



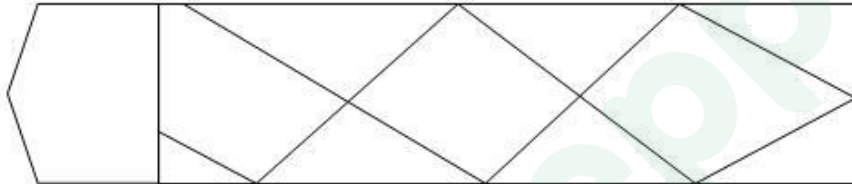
Ans  1.



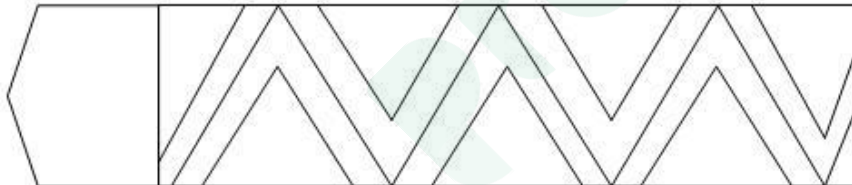
2.



3.



4.



Question ID : 8161613491

Status : Answered

Chosen Option : 2

Q.20 Select the option in which the numbers are related in the same way as are the numbers in the given set.

(13, 133, 6)

Ans  1. (9, 65, 4)

2. (10, 8, 6)

3. (3, 4, 2)

4. (11, 122, 2)

Question ID : 8161613474

Status : Answered

Latest Sarkari Jobs, Govt Exam Results,  
Vacancies and updates on one click

Know More

Q.21 Select the option that is related to the third word in the same way as the second word is related to the first word.

India : Delhi :: Jharkhand : ?

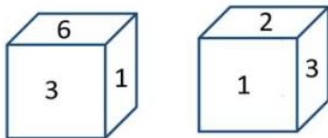
- Ans
- 1. Dispur
  - 2. Bhubaneshwar
  - 3. Ranchi
  - 4. Bhopal

Question ID : 8161613481

Status : Answered

Chosen Option : 3

Q.22 Two different positions of the same dice are shown. Select the number that will be on the face opposite to the one having '6'.



- Ans
- 1. 5
  - 2. 1
  - 3. 4
  - 4. 2

Question ID : 8161613488

Status : Answered

Chosen Option : 4

Q.23 A pipe can fill a leak-proof tank completely in 24 hours. A leakage at the midpoint of Same size tank empties half the tank in 36 hours. How much time will it take to fill this tank with the given pipe?

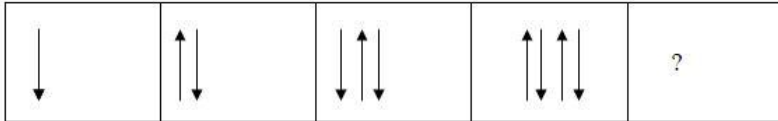
- Ans
- 1. 14.4 hrs
  - 2. 30 hrs
  - 3. 18 hrs
  - 4. 72 hrs

Question ID : 8161613470

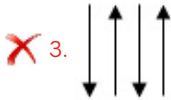
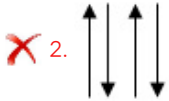
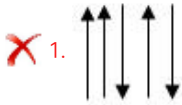
Status : Answered

Chosen Option : 4

Q.24 Select the option figure that can replace the question mark (?) in the following series.



Ans



Question ID : 8161613489

Status : Answered

Chosen Option : 4

Q.25 Shraddha says to Sharayu, "Your mother-in-law is my father's mother who is eldest son, but your husband is not my father." How is Sharayu related to Shraddha?

- Ans
- 1. Niece
  - 2. Daughter
  - 3. Mother
  - 4. Aunt

Question ID : 8161613483

Status : Not Answered

Chosen Option : --

Section : Quantitative Aptitude(Basic Arithmetic Skill)

Q.1 The average age of a man and his son is 60 years. The ratio of their ages is 13 : 7, respectively. What is the son's age?

- Ans
- 1. 40 years
  - 2. 41 years
  - 3. 42 years
  - 4. 43 years

Question ID : 8161613498

Status : Answered

Latest Sarkari Jobs, Govt Exam Results,  
Vacancies and updates on one click

Know More

Q.2 The centroid of an equilateral triangle  $\Delta PQR$  is L. If  $PQ = 18$  cm, then the length of PL is:

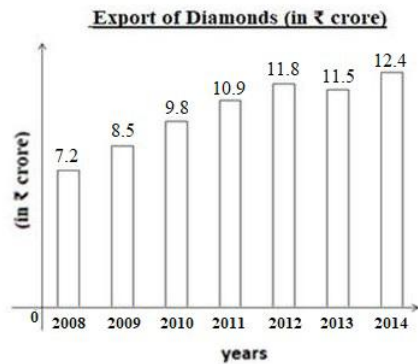
- Ans
- 1.  $3\sqrt{3}$  cm
  - 2.  $5\sqrt{3}$  cm
  - 3.  $6\sqrt{3}$  cm
  - 4.  $4\sqrt{3}$  cm

Question ID : 8161613507

Status : Not Answered

Chosen Option : --

Q.3 Study the following bar graph and answer the question that follows.



In which of the following pairs of years, the average export of diamonds was closest to ₹12 crores?

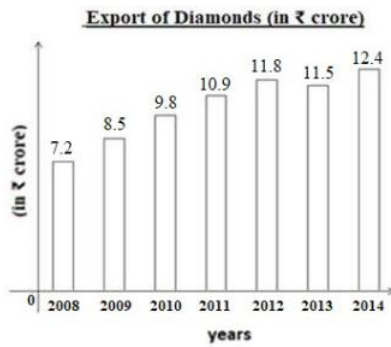
- Ans
- 1. 2010 and 2011
  - 2. 2013 and 2014
  - 3. 2011 and 2012
  - 4. 2012 and 2013

Question ID : 8161613518

Status : Answered

Chosen Option : 4

Q.4 Study the following bar graph and answer the question that follows.



In which year was the maximum percentage increase in diamond exports compared to the previous year?

- Ans
- 1. 2010
  - 2. 2012
  - 3. 2014
  - 4. 2009

Question ID : 8161613519

Status : Answered

Chosen Option : 4

Q.5 A person bought 60 books for ₹60 each. He sold 50 of them at a loss of 4%. At what per cent profit should he sell the remaining books so that he gains 5% in the entire transaction?

- Ans
- 1. 50%
  - 2. 40%
  - 3. 30%
  - 4. 60%

Question ID : 8161613501

Status : Answered

Chosen Option : 3

Q.6 The tangent at a point A of a circle with centre O intersects the diameter PQ of the circle (when extended) at the point B. If  $\angle BAP = 125^\circ$ , then  $\angle AQP$  is equal to:

- Ans
- 1.  $50^\circ$
  - 2.  $55^\circ$
  - 3.  $60^\circ$
  - 4.  $45^\circ$

Question ID : 8161613504

Status : Answered

Chosen Option : 2

Q.7 If  $(a + 3b) : (2a + 4b) = 3 : 5$ , then  $(a - b) : (a + b)$  is equal to:

- Ans
- 1. 1 : 2
  - 2. 2 : 1
  - 3. 3 : 2
  - 4. 2 : 3

Question ID : 8161613502

Status : Answered

Chosen Option : 4

Q.8 At simple interest Gaurav borrows ₹1,500 from Sandeep at the rate of 14% per annum. What amount of money should Gaurav pay to Sandeep after 1 year to clear the debt?

- Ans
- 1. ₹1,700
  - 2. ₹1,710
  - 3. ₹1,705
  - 4. ₹1,715

Question ID : 8161613503

Status : Answered

Chosen Option : 2

Q.9 If  $\cot A = \tan(2A - 45^\circ)$ , A is an acute angle then  $\tan A$  is equal to:

- Ans
- 1.  $\frac{1}{2}$
  - 2. 0
  - 3.  $\sqrt{3}$
  - 4. 1

Question ID : 8161613514

Status : Answered

Chosen Option : 4

Q.10 How many minutes does Shyam take to cover a distance of 500 m if he runs at a speed of 30 km/h?

- Ans
- 1. 2
  - 2.  $2\frac{1}{2}$
  - 3.  $1\frac{1}{2}$
  - 4. 1

Question ID : 8161613496

Status : Answered

Q.11 Richa invests in mutual funds a sum of ₹5,59,968, which is 19% of her annual income. What is her monthly income?

- Ans
- 1. ₹4,45,600
  - 2. ₹1,45,600
  - 3. ₹3,45,600
  - 4. ₹2,45,600

Question ID : 8161613500  
Status : Not Answered  
Chosen Option : --

Q.12 A single discount equivalent to a discount series of 5%, 10%, 15% and 20%, is:

- Ans
- 1. 43.86%
  - 2. 42.86%
  - 3. 40.86%
  - 4. 41.86%

Question ID : 8161613499  
Status : Answered  
Chosen Option : 1

Q.13 The side ST of  $\Delta RST$  is produced to P. If  $\angle RTP = 115^\circ$  and  $\angle S = \frac{2}{3}\angle R$ , then the measure of  $\angle R$  is:

- Ans
- 1.  $68^\circ$
  - 2.  $69^\circ$
  - 3.  $67^\circ$
  - 4.  $66^\circ$

Question ID : 8161613506  
Status : Answered  
Chosen Option : 2

Q.14 The value of  $\sin^2 38^\circ - \cos^2 52^\circ$  is:

- Ans
- 1.  $\frac{1}{\sqrt{2}}$
  - 2. 1
  - 3.  $\sqrt{2}$
  - 4. 0

Question ID : 8161613513  
Status : Answered  
Chosen Option : 2



Q.15 If  $a + 2b = 10$  and  $2ab = 9$ , then  $|a - 2b|$  is equal to:

- Ans
- 1. 4
  - 2. 6
  - 3. 8
  - 4. 2

Question ID : 8161613508

Status : Answered

Chosen Option : 4

Q.16 If the value of  $\sec B + \tan B = r$ , then the value of  $\sec B - \tan B$  is equal to:

- Ans
- 1. 0
  - 2.  $\frac{1}{r}$
  - 3.  $r^2$
  - 4.  $-r$

Question ID : 8161613515

Status : Answered

Chosen Option : 2

Q.17 What is the value of

$$-77 + 800 \div [83 - \{8 \times 9 + (18 - 3 \times 5)\}]?$$

- Ans
- 1. 24
  - 2. 23
  - 3. 26
  - 4. 25

Question ID : 8161613512

Status : Answered

Chosen Option : 2

Q.18 Antony and Vikash together can complete a piece of work in 20 days and Vikash alone can complete it in 25 days. In how many days can Antony alone complete the same work?

- Ans
- 1. 90 days
  - 2. 80 days
  - 3. 100 days
  - 4. 110 days

Question ID : 8161613495

Status : Answered

Q.19  $2^{25} + 2^{26} + 2^{27}$  is divisible by:

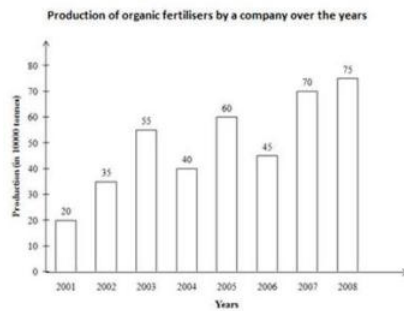
- Ans  1. 6  
 2. 7  
 3. 5  
 4. 9

Question ID : 8161613511

Status : Answered

Chosen Option : 1

Q.20 Study the bar graph and answer the question that follows.



The ratio of the total production of organic fertilisers by the company in the years 2005, 2006 and 2008 to the total production in the years 2001, 2002, 2003 and 2004, is:

- Ans  1. 5 : 6  
 2. 3 : 4  
 3. 6 : 5  
 4. 4 : 3

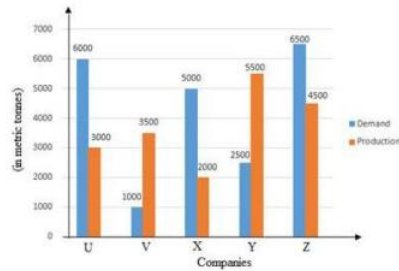
Question ID : 8161613517

Status : Answered

Chosen Option : 3

Q.21 Study the graph and answer the question that follows.

The chart represents the demand and production of a certain item (in metric tonnes) for five companies U, V, X, Y and Z.



If  $p\%$  of the demand of the item for company U is equal to the production for company Z, then  $p$  is equal to:

- Ans
- 1. 55
  - 2. 85
  - 3. 65
  - 4. 75

Question ID : 8161613516

Status : Answered

Chosen Option : 4

Q.22 If  $4x^2 + y^2 = 40$  and  $xy = 6$ , ( $x > 0, y > 0$ ) then the value of  $2x + y$  is

- Ans
- 1. 24
  - 2. 16
  - 3. 4
  - 4. 8

Question ID : 8161613509

Status : Answered

Chosen Option : 4

Q.23 Two circles with centres P and Q of radii 7 cm and 3 cm, respectively, touch each other externally at a point A. BC is a direct common tangent to these two circles where B and C are the points on the circles respectively. The length of BC is:

- Ans
- 1.  $3\sqrt{21}$  cm
  - 2.  $\sqrt{21}$  cm
  - 3.  $2\sqrt{21}$  cm
  - 4.  $4\sqrt{21}$  cm

Question ID : 8161613505

Status : Answered

Chosen Option : 2

Q.24 If  $x^3 + 27y^3 + 64z^3 = 36xyz$ , then the relationship between  $x$ ,  $y$  and  $z$  is

- Ans
- 1.  $x + y + z = 0$
  - 2.  $x - 3y + 4z = 0$
  - 3.  $x + 3y = 4z$
  - 4.  $x + 3y + 4z = 0$

Question ID : 8161613510

Status : Answered

Chosen Option : 1

Q.25 If the breadth and perimeter of a rectangle are in the ratio 1 : 8 and the area of rectangle is  $363 \text{ cm}^2$ , then the breadth of the rectangle is:

- Ans
- 1. 11 cm
  - 2. 12 cm
  - 3. 10 cm
  - 4. 13 cm

Question ID : 8161613497

Status : Answered

Chosen Option : 1

Section : General Awareness

Q.1 Name the first Chief Scientist of the public health division at the World Health Organisation.

- Ans
- 1. Dr. Zsuzsanna Jakab
  - 2. Dr. Soumya Swaminathan
  - 3. Dr. Michael Ryan
  - 4. Dr. Harsh Vardhan

Question ID : 8161613538

Status : Not Answered

Chosen Option : --

Q.2 What was the theme of International Nurses Day in 2020?

- Ans
- 1. Health for All
  - 2. Achieving the Sustainable Development Goals
  - 3. Nursing the World to Health
  - 4. Health is a Human Right

Question ID : 8161613525

Status : Answered

Chosen Option : 3

Q.3 Locomotion in \_\_\_\_\_ takes place with the help of a muscular foot.

- Ans
- 1. jellyfish
  - 2. snails
  - 3. earthworms
  - 4. sea urchins

Question ID : 8161613530

Status : Answered

Chosen Option : 1

Q.4 The Maharaja of \_\_\_\_\_ was the first Indian cricketer to serve as President of the Board of Control for Cricket in India (BCCI).

- Ans
- 1. Rewa
  - 2. Vizianagaram
  - 3. Baroda
  - 4. Mysore

Question ID : 8161613544

Status : Answered

Chosen Option : 4

Q.5 'FIR Aapke Dwar', an initiative whereby police officials would visit homes of victims to register a First Information Report (FIR), was launched in the state of \_\_\_\_\_ in May 2020.

- Ans
- 1. Madhya Pradesh
  - 2. Uttar Pradesh
  - 3. Bihar
  - 4. Maharashtra

Question ID : 8161613526

Status : Not Answered

Chosen Option : --

Q.6 Which of the following states was declared as the cleanest state in Swachh Survekshan 2019?

- Ans
- 1. Maharashtra
  - 2. Chhattisgarh
  - 3. Jharkhand
  - 4. Uttarakhand

Question ID : 8161613524

Status : Answered

Chosen Option : 4

Q.7 Which of the following sites does NOT feature in the United Nations' World Heritage List as of June 2020?

- Ans
- 1. Ellora Caves
  - 2. Elephanta Caves
  - 3. Ajanta Caves
  - 4. Karla Caves

Question ID : 8161613522  
Status : Answered  
Chosen Option : 4

Q.8 Who has developed the Automatically Programmable Tool (APT)?

- Ans
- 1. Gary Kildall
  - 2. Douglas T Ross
  - 3. Ralph H Baer
  - 4. Jonathan Fletcher

Question ID : 8161613521  
Status : Not Answered  
Chosen Option : --

Q.9 Which of the following is an example of a terrestrial natural disaster?

- Ans
- 1. Blizzard
  - 2. Tornado
  - 3. Landslide
  - 4. Thunderstorm

Question ID : 8161613534  
Status : Not Answered  
Chosen Option : --

Q.10 The Indian Government annexed \_\_\_\_\_ in 1948 under the code name 'Operation Polo'.

- Ans
- 1. Hyderabad
  - 2. Gwalior
  - 3. Mysore
  - 4. Baroda

Question ID : 8161613540  
Status : Not Answered  
Chosen Option : --

Q.11 Who was India's first Chief of Defence Staff?

- Ans
- 1. Ajit Doval
  - 2. Gopal Gurunath Bewoor
  - 3. Bipin Rawat
  - 4. Sam Maneckshaw

Question ID : 8161613539  
Status : Not Answered  
Chosen Option : --

Q.12 Depression is a \_\_\_\_\_ disorder.

- Ans
- 1. mood
  - 2. dissociative
  - 3. schizophrenic
  - 4. somatoform

Question ID : 8161613529  
Status : Answered  
Chosen Option : 3

Q.13 The sino-atrial node is located in the \_\_\_\_\_.

- Ans
- 1. bladder
  - 2. heart
  - 3. brain
  - 4. stomach

Question ID : 8161613531  
Status : Not Answered  
Chosen Option : --

Q.14 Inscriptions composed in praise of kings of ancient India are known as \_\_\_\_\_.

- Ans
- 1. Tripitakas
  - 2. Sutras
  - 3. Jatakas
  - 4. Prashastis

Question ID : 8161613537  
Status : Not Answered  
Chosen Option : --

Q.15 Which of the following states has one of the richest monazite deposits in India?

- Ans  1. Kerala  
 2. Gujarat  
 3. Jharkhand  
 4. Rajasthan

Question ID : 8161613535  
Status : Not Answered  
Chosen Option : --

Q.16 1 Petabyte (PB) = 1024 \_\_\_\_\_.

- Ans  1. Zettabytes (ZB)  
 2. Exabytes (EB)  
 3. Terabytes (TB)  
 4. Gigabytes (GB)

Question ID : 8161613520  
Status : Not Answered  
Chosen Option : --

Q.17 The Bandhavgarh Tiger Reserve is located in the state of \_\_\_\_\_.

- Ans  1. Rajasthan  
 2. Uttarakhand  
 3. Andhra Pradesh  
 4. Madhya Pradesh

Question ID : 8161613532  
Status : Not Answered  
Chosen Option : --

Q.18 As of April 2020, \_\_\_\_\_ holds the record for delivering the most number of balls by any woman cricketer in Women's test history.

- Ans  1. Anjum Chopra  
 2. Harmanpreet Kaur  
 3. Diana Edulji  
 4. Mithali Raj

Question ID : 8161613543  
Status : Not Answered  
Chosen Option : --



Q.19 In May 2020, the Government of India raised the net borrowing limit for state governments to \_\_\_\_\_% of the gross state domestic product (GSDP).

- Ans  1. 5  
 2. 7  
 3. 3  
 4. 10

Question ID : 8161613528  
Status : Not Answered  
Chosen Option : --

Q.20 \_\_\_\_\_ is a traditional Indian sport, whereby athletes perform various types of gymnastics moves and hold various poses on a vertical wooden pole.

- Ans  1. Kalaripayattu  
 2. Nadan Panthu Kali  
 3. Mallakhamb  
 4. Yubi Lakpi

Question ID : 8161613542  
Status : Not Answered  
Chosen Option : --

Q.21 \_\_\_\_\_ was a mentor to both, Mahatma Gandhi and Mohammed Ali Jinnah.

- Ans  1. Gopal Krishna Gokhale  
 2. Rabindranath Tagore  
 3. Lala Lajpat Rai  
 4. Bal Gangadhar Tilak

Question ID : 8161613536  
Status : Answered  
Chosen Option : 1

Q.22 Yadgir, Bidar and Gadag are districts are in the state of \_\_\_\_\_.

- Ans  1. Karnataka  
 2. Tamil Nadu  
 3. Andhra Pradesh  
 4. Kerala

Question ID : 8161613533  
Status : Not Answered  
Chosen Option : --

Q.23 The first Backward Classes Commission of India was headed by \_\_\_\_\_.

- Ans
- 1. Gopal Krishna Gokhale
  - 2. Kaka Kalelkar
  - 3. Lokmanya Tilak
  - 4. Nanaji Deshmukh

Question ID : 8161613541  
Status : Answered  
Chosen Option : 4

Q.24 With which bank has Ashok Leyland, the commercial vehicle brand, tied up in November 2019 for vehicle loans for a period of 2 years?

- Ans
- 1. HDFC Bank
  - 2. Punjab National Bank
  - 3. ICICI Bank
  - 4. State Bank of India

Question ID : 8161613527  
Status : Not Answered  
Chosen Option : --

Q.25 The \_\_\_\_\_ festival is celebrated by the Ahom people of Assam on 31st January every year in memory of the departed.

- Ans
- 1. Me-Dam-Me-Phi
  - 2. TirthaMukh
  - 3. Lampra Puja
  - 4. Ashokastami

Question ID : 8161613523  
Status : Not Answered  
Chosen Option : --



# Latest Sarkari jobs, Govt Exam alerts, Results and Vacancies

- ▶ Latest News and Notification
- ▶ Exam Paper Analysis
- ▶ Topic-wise weightage
- ▶ Previous Year Papers with Answer Key
- ▶ Preparation Strategy & Subject-wise Books

To know more [Click Here](#)



[www.prepp.in](http://www.prepp.in)