



Practice, Learn and Achieve
Your Goal with Prepp

SSC MTS Exam

Previous Paper

Simplifying
Government Exams

 SSC CHSL	 IAS EXAM	 RRB NTPC	 NTSE	 CDS
 SSC CGL	 CBSE UGC NET	 IBPS PO	 NDA	
 SBI PO	 IBPS CLERK	 AFCAT	 SSC JE	 CTET
 CSIR UGC NET	 CAPF	 IBPS RRB		

www.prepp.in

Section : General English

Q.1 Identify the segment in the sentence which contains the grammatical error from the given options.

In the evening he likes to read books and articles that have nothing to do of his work.

- Ans
- 1. do of his work.
 - 2. that have nothing to
 - 3. In the evening he likes
 - 4. to read books and articles

Question ID : 2390871745
Status : Marked For Review
Chosen Option : 2

Q.2 Select the most appropriate option to substitute the underlined segment in the given sentence. If there is no need to substitute it, select 'No substitution required'.

We found out that our competitors were selling a similar product on a much higher price.

- Ans
- 1. at a more high price.
 - 2. No substitution required
 - 3. in highest price.
 - 4. at a much higher price.

Question ID : 2390871750
Status : Marked For Review
Chosen Option : 1

Q.3 Select the most appropriate word to fill in the blank and make a meaningful sentence.

The culprits should not be allowed to _____ easily.

- Ans
- 1. get away
 - 2. get on
 - 3. get up
 - 4. get in

Question ID : 2390871770
Status : Answered
Chosen Option : 1

Q.4 Identify the segment in the sentence which contains the grammatical error from the given options.

The player was declare run-out as he failed to complete the run.

- Ans
- 1. he failed to
 - 2. complete the run
 - 3. run-out as

4. The player was declare

Question ID : 2390871747
Status : Answered
Chosen Option : 4

Q.5 Select the most appropriate word to fill in the blank and make a meaningful sentence.

The customers _____ the company with complaints against the price increase.

- Ans
- 1. hoarded
 - 2. flooded
 - 3. failed
 - 4. criticized

Question ID : 2390871769
Status : Answered
Chosen Option : 4

Q.6 Select the antonym of the given word.

Adept

- Ans
- 1. Efficient
 - 2. Competent
 - 3. Inept
 - 4. Skilled

Question ID : 2390871762
Status : Answered
Chosen Option : 3

Q.7 Select the meaning of the given idiom.

A wild-goose chase

- Ans
- 1. Delayed action
 - 2. Wise decision
 - 3. Useless search
 - 4. Timely action

Question ID : 2390871763
Status : Answered
Chosen Option : 3

Q.8 Select the most appropriate option to substitute the underlined segment in the given sentence. If there is no need to substitute it, select 'No substitution required'.

The study found that men who were married lived longer than those who were not.

- Ans
- 1. No substitution required
 - 2. that who were
 - 3. these who were
 - 4. the one who were

Question ID : 2390871748
Status : Answered
Chosen Option : 1

Q.9 Select the most appropriate option to fill in the blank and make a grammatically correct sentence.

The police _____ h

- Ans
- 1. officer s
 - 2. officers'
 - 3. officer
 - 4. officers

Question ID : 2390871757
Status : Answered
Chosen Option : 1

Q.10 Select the meaning of the given idiom.

Be at your wits' end

- Ans
- 1. Be overwhelmed with problems
 - 2. Careful thinking
 - 3. Do something confidently
 - 4. To be overjoyed

Question ID : 2390871764
Status : Not Answered
Chosen Option : --

Q.11 Select the antonym of the given word.

Delicious

- Ans
- 1. Tepid
 - 2. Gross
 - 3. Insipid
 - 4. Salty

Question ID : 2390871761
Status : Not Answered
Chosen Option : --

Q.12 Select the most appropriate option to fill in the blank and make a grammatically correct sentence.

The passengers _____ left Paris airport at six arrived in Rome an hour later.

- Ans
- 1. whoever
 - 2. who
 - 3. which
 - 4. whom

Question ID : 2390871758
Status : Answered
Chosen Option : 2

Q.13 Select the correctly spelt word.

- Ans
- 1. Commitee
 - 2. Committee
 - 3. Committe
 - 4. Comittee

Question ID : 2390871768
Status : Answered
Chosen Option : 2

given options.

If they said nothing, she could sense their disapproval of her suggestion.

- Ans
- 1. she could sense
 - 2. If they said nothing
 - 3. their disapproval of
 - 4. her suggestion.

Question ID : 2390871746
Status : Not Answered
Chosen Option : --

Q.15 Select the word which means the same as the group of words given.

A speech made to oneself

- Ans
- 1. Dialogue
 - 2. Eloquent
 - 3. Solitary
 - 4. Soliloquy

Question ID : 2390871765
Status : Answered
Chosen Option : 4

Q.16 Select the word which means the same as the group of words given.

Who believes others easily and can be cheated

- Ans
- 1. Native
 - 2. Fraud
 - 3. Incredible
 - 4. Gullible

Question ID : 2390871766
Status : Answered
Chosen Option : 4

Q.17 Select the correctly spelt word.

- Ans
- 1. Anniversiry
 - 2. Anniversery
 - 3. Anniversary
 - 4. Aniversary

Question ID : 2390871767
Status : Answered
Chosen Option : 3

Comprehension:

In the following passage some words have been deleted. Fill in the blanks with the help of the alternatives given. Select the most appropriate option for each blank.

An earthquake is the shaking of the ground caused by the sudden breaking and (1)_____ of large sections of the Earth's rocky outer shell. Scientists estimate that there (2)_____ more than 8,000 minor earthquakes each day. Of these, only about 1,000 are strong (3)_____ to be felt. At least 40 moderate earthquakes cause damage somewhere (4)_____ the world each year. A really powerful earthquake only occurs, on average, once every two years, (5)_____ when it does, the results can be devastating.

SubQuestion No : 18

Q.18 Select the most appropriate option to fill in blank No 1

- 1. stirring
- 2. bringing
- 3. pushing
- 4. hanging

Question ID : 2390871752
Status : Answered
Chosen Option : 3

Comprehension:

In the following passage some words have been deleted. Fill in the blanks with the help of the alternatives given. Select the most appropriate option for each blank.

An earthquake is the shaking of the ground caused by the sudden breaking and (1)_____ of large sections of the Earth's rocky outer shell. Scientists estimate that there (2)_____ more than 8,000 minor earthquakes each day. Of these, only about 1,000 are strong (3)_____ to be felt. At least 40 moderate earthquakes cause damage somewhere (4)_____ the world each year. A really powerful earthquake only occurs, on average, once every two years, (5)_____ when it does, the results can be devastating.

SubQuestion No : 19

Q.19 Select the most appropriate option to fill in blank No.2.

- Ans
- 1. have
 - 2. are
 - 3. is
 - 4. has

Question ID : 2390871753
Status : Answered
Chosen Option : 2

Comprehension:

In the following passage some words have been deleted. Fill in the blanks with the help of the alternatives given. Select the most appropriate option for each blank.

An earthquake is the shaking of the ground caused by the sudden breaking and (1)_____ of large sections of the Earth's rocky outer shell. Scientists estimate that there (2)_____ more than 8,000 minor earthquakes each day. Of these, only about 1,000 are strong (3)_____ to be felt. At least 40 moderate earthquakes cause damage somewhere (4)_____ the world each year. A really powerful earthquake only occurs, on average, once every two years, (5)_____ when it does, the results can be devastating.

SubQuestion No : 20

Q.20 Select the most appropriate option to fill in blank No.3.

- Ans
- 1. enough
 - 2. adequate
 - 3. sufficient
 - 4. capable

Question ID : 2390871754
Status : Marked For Review
Chosen Option : 3

Comprehension:

In the following passage some words have been deleted. Fill in the blanks with the help of the alternatives given. Select the most appropriate option for each blank.

An earthquake is the shaking of the ground caused by the sudden breaking and (1)_____ of large sections of the Earth's rocky outer shell. Scientists estimate that there (2)_____ more than 8,000 minor earthquakes each day. Of these, only about 1,000 are strong (3)_____ to be felt. At least 40 moderate earthquakes cause damage somewhere (4)_____ the world each year. A really powerful earthquake only occurs, on average, once every two years, (5)_____ when it does, the results can be devastating.

SubQuestion No : 21

Ans

- 1. into
- 2. in
- 3. on
- 4. at

Question ID : 2390871755

Status : **Marked For Review**

Chosen Option : 2

Comprehension:

In the following passage some words have been deleted. Fill in the blanks with the help of the alternatives given. Select the most appropriate option for each blank.

An earthquake is the shaking of the ground caused by the sudden breaking and (1)_____ of large sections of the Earth's rocky outer shell. Scientists estimate that there (2)_____ more than 8,000 minor earthquakes each day. Of these, only about 1,000 are strong (3)_____ to be felt. At least 40 moderate earthquakes cause damage somewhere (4)_____ the world each year. A really powerful earthquake only occurs, on average, once every two years, (5)_____ when it does, the results can be devastating.

SubQuestion No : 22

Q.22 Select the most appropriate option to fill in blank No.5.

Ans

- 1. as
- 2. while
- 3. whereas
- 4. but

Question ID : 2390871756

Status : **Answered**

Chosen Option : 4

Q.23 Select the most appropriate option to substitute the underlined segment in the given sentence. If there is no need to substitute it, select 'No substitution required'.

They couldn't find what they wanted and decide to look elsewhere.

Ans

- 1. decided to look
- 2. have decided to look
- 3. had decided looking
- 4. No substitution required

Question ID : 2390871749

Status : **Answered**

Chosen Option : 1

Q.24 Select the synonym of the given word.

Confusion

Ans

- 1. Devotion
- 2. Muddle
- 3. Assurance
- 4. Clarity

Question ID : 2390871760

Status : **Marked For Review**

Chosen Option : 2

Q.25 Select the synonym of the given word.

Aroma

- 1. Smell
- 2. Scent
- 3. Sneeze
- 4. Stench

Question ID : 2390871759
Status : Not Answered
Chosen Option : --

Section : General Intelligence & Reasoning

Q.1 In a certain code language, 'HORSE' is written as '98543', 'WASTE' is written as '16423'. What is the code for 'ROAST' in that code language?

- Ans 1. 58642
- 2. 58692
 - 3. 51642
 - 4. 53642

Question ID : 2390871571
Status : Answered
Chosen Option : 1

Q.2 In the following question, select the number which can be placed at the sign of question mark (?) from the given alternatives.

5 3 7
6 15 12
9 2 3
? 20 22

- Ans 1. 18
- 2. 26
 - 3. 24
 - 4. 20

Question ID : 2390871581
Status : Answered
Chosen Option : 4

Q.3 Select the number that can replace the question mark (?) in the following series.

39, 19, 58, 77, 135, ?

- Ans 1. 212
- 2. 224
 - 3. 196
 - 4. 202

Question ID : 2390871578
Status : Answered
Chosen Option : 1

Q.4 Select the option that is related to the third term in the same way as the second term is related to the first term.

Season : Winter :: Figure : ?





- Ans 1. Sides
- 2. Diagonal
 - 3. Triangle
 - 4. Angle

Question ID : 2390871566
Status : Answered
Chosen Option : 3

Q.5 Identify the Venn diagram that best represents the relationship between the given classes.

Bottle, Cat, Book

Ans

1. 
2. 
3. 
4. 

Question ID : 2390871589
Status : Answered
Chosen Option : 3

Q.6 In a certain code language, 'MOUSE' is written as 'FTVPN'. What is the code for 'ROPED' in that code language?

Ans

1. EEQPS
2. EFQPS
3. FESQT
4. FGRQT

Question ID : 2390871569
Status : Answered
Chosen Option : 2

Q.7 After interchanging the signs 'x and ÷', what will be the value of the given equation?

$$11 + 13 - 24 \times 3 \div 2 = ?$$

Ans

1. 6
2. 10
3. 8
4. 12

Question ID : 2390871582
Status : Answered
Chosen Option : 3

Q.8 Select the option that is related to the third Letter Cluster in the same way as the second Letter Cluster is related to the first Letter Cluster.

ROLF : VTRM :: NODP : ?

Ans

1. RTJW
2. RUJW

- 3. SVRX
- 4. SVRX

Question ID : 2390871568
 Status : Answered
 Chosen Option : 1

Q.9 In the following question below are given some statements followed by some conclusions based on those statements. Taking the given statements to be true even if they seem to be at variance from commonly known facts. Read all the conclusions and then decide which of the given conclusion logically follows the given statements.

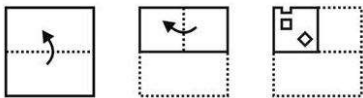
Statements:
 I. All J are M.
 II. Some K are M.

Conclusions:
 I. Some K are J.
 II. Some M are K.
 III. Some M are J.

- Ans**
- 1. Both conclusion I and III follows.
 - 2. Both conclusion II and III follows.
 - 3. Only conclusion I follows.
 - 4. Both conclusion I and II follows.

Question ID : 2390871577
 Status : Answered
 Chosen Option : 2

Q.10 A piece of paper is folded and punched as shown below in the question figures, indicate how it will appear when opened?



- Ans**
- 1.
 - 2.
 - 3.
 - 4.

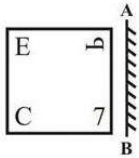
Question ID : 2390871588
 Status : Answered
 Chosen Option : 1

'TRAVEL' in that code language?

- Ans
- 1. ZZGCKS
 - 2. YYFBJR
 - 3. ZYGCKS
 - 4. YXFBJR

Question ID : 2390871570
Status : Answered
Chosen Option : 4

Q.12 If a mirror is placed on the line AB, then which of the answer figures is the right image of the given figure?



Ans

- 1.
- 2.
- 3.
- 4.

Question ID : 2390871587
Status : Answered
Chosen Option : 2

Q.13 Select the option that is related to the third term in the same way as the second term is related to the first term.

Cold : Refrigerator :: Hot : ?

- Ans
- 1. AC
 - 2. Cold
 - 3. Paper
 - 4. Oven

Question ID : 2390871567
Status : Answered

Q.14 By interchanging the given signs which of the following equations will be correct?

+ and ×

- Ans
- 1. $11 + 13 \div 6 \times 12 = 37$
 - 2. $16 + 32 \times 19 \div 38 = 32$
 - 3. $9 \times 5 \div 10 + 30 = 24$
 - 4. $5 + 11 - 6 \times 3 = -2$

Question ID : 2390871583
 Status : Answered
 Chosen Option : 3

Q.15 Select the letter-pair that can replace the question mark (?) in the following series.

JL, GJ, DH, AF, ?

- Ans
- 1. XC
 - 2. YC
 - 3. XD
 - 4. YD

Question ID : 2390871565
 Status : Answered
 Chosen Option : 3

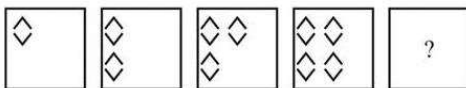
Q.16 Six boys R, L, B, T, W and N are standing in a row facing towards north (Not necessarily in the same order). Two boys are standing between R and N. T is standing to the immediate left of R. L is standing second to the left of B. W is third to the right of B.

Who is standing to the immediate right of R?

- Ans
- 1. T
 - 2. W
 - 3. B
 - 4. L


Question ID : 2390871574
 Status : Answered
 Chosen Option : 4

Q.17 In the following question, select the figure which can be placed at the sign of question mark (?) from the given alternatives.



Ans

- 1.
- 2.
- 3.



Question ID : 2390871584
 Status : Answered
 Chosen Option : 3

Q.18 Five movies F1, F2, F3, F4 and F5 (not necessarily in the same order) are displayed from Monday to Friday. Only one movie is displayed on one day. Each movie is displayed only one time. Movie F1 is displayed on Monday. Two movies are displayed between F4 and F5. F2 is displayed just one day after F5. Which movie is displayed on Wednesday?

- Ans
- 1. F2
 - 2. F5
 - 3. F4
 - 4. F3

Question ID : 2390871575
 Status : Answered
 Chosen Option : 4

Q.19 From the given answer figures, select the one in which the question figure is hidden/embedded. (Rotation is not allowed)



Ans

- 1.
- 2.
- 3.
- 4.

Question ID : 2390871586
 Status : Answered
 Chosen Option : 4

Q.20 In the following question below are given some statements followed by some conclusions based on those statements. Taking the given statements to be true even if they seem to be at variance from commonly known facts. Read all the conclusions and then decide which of

Statements:

- I. Some red are wood.
- II. No wood is bench.

Conclusions:

- I. No bench is red.
- II. No bench is wood.
- III. Some red are bench.

- Ans
- 1. Conclusion II and either I or III follow.
 - 2. Neither conclusion follow.
 - 3. Only conclusion I follows.
 - 4. Only conclusion III follows.

Question ID : 2390871576

Status : Marked For Review

Chosen Option : 1

Q.21 In a certain code language, 'PHONE' is written as '5', 'MONDAY' is written as '6'. What is the code for 'WEDNESDAY' in that code language?

- Ans
- 1. 11
 - 2. 8
 - 3. 7
 - 4. 9

Question ID : 2390871572

Status : Answered

Chosen Option : 4

Q.22 Select the option that is related to the third number in the same way as the second number is related to the first number.

95 : 141 :: 87 : ?

- Ans
- 1. 133
 - 2. 147
 - 3. 127
 - 4. 137

Question ID : 2390871580

Status : Not Attempted and Marked For Review

Chosen Option : --

Q.23 Select the number that can replace the question mark (?) in the following series.

461, 481, 502, 524, 547, ?

- Ans
- 1. 585
 - 2. 571
 - 3. 573
 - 4. 581


Question ID : 2390871579

Status : Answered

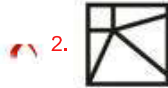
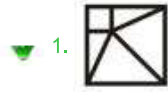
Chosen Option : 2

Q.24

which answer figure will complete the pattern in the question figure :



Ans



Question ID : 2390871585

Status : Answered

Chosen Option : 1

Q.25 Six employees R1, R2, R3, R4, R5 and R6 are sitting around a circular table facing towards the centre (not necessarily in the same order). R5 is third to the left of R3. R2 is to the immediate left of R4. R1 is to the immediate left of R5. Which of the following statement is incorrect about R6?

Ans

1. R5 is to the immediate right of R6.

2. R4 is second to the left of R6.

3. R6 is between R3 and R1.

4. R2 is sitting opposite to R6.

Question ID : 2390871573

Status : Answered

Chosen Option : 1

Section : Numerical Aptitude

Q.1 The Table shows the number of T-20 matches played, runs scored, 50s and 100s scored by four Indian batsmen in a particular year.

Player	Matches played	Runs scored	50s	100s
Virat	16	900	4	3
Rohit	20	840	5	1
Shikhar	25	1050	6	2
Suresh	12	450	4	0

Total number of runs scored by all four batsmen is:

Ans

1. 3240

2. 1620

3. 1500

4. 1450

Question ID : 2390871437

Status : Answered

Chosen Option : 1

how many days?

- Ans
- 1. 16 days
 - 2. 21 days
 - 3. 15 days
 - 4. 14 days

Question ID : 2390871431
Status : Answered
Chosen Option : 2

Q.3 The product of two numbers is 6845, if the HCF of the number is 37, then the greater number is:

- Ans
- 1. 148
 - 2. 111
 - 3. 37
 - 4. 185

Question ID : 2390871415
Status : Answered
Chosen Option : 4

Q.4 If the ratio of selected to unselected candidates was 14 : 25. If 35 less had applied and 10 less selected, the ratio of selected to unselected would have been 3 : 5. What is the Number of candidates who had applied for a job?

- Ans
- 1. 175
 - 2. 275
 - 3. 195
 - 4. 200

Question ID : 2390871427
Status : Answered
Chosen Option : 3

Q.5 How many balls of radius 45 cm can be made by melting a bigger ball of diameter 360 cm?

- Ans
- 1. 48
 - 2. 128
 - 3. 64
 - 4. 32

Question ID : 2390871435
Status : Answered
Chosen Option : 3

Q.6 A can do 50% of the job in 16 days, B can do one-fourth of the same job in 24 days. Working together, in how many days they can do seven-fourth of the job?

- Ans
- 1. 24
 - 2. 42
 - 3. 27
 - 4. 28

Question ID : 2390871430
Status : Answered
Chosen Option : 2

Q.7

allowing a discount of 16%, the shopkeeper earns 12% profit?

- Ans
- 1. 14,330
 - 2. 16,500
 - 3. 16,000
 - 4. 13,440

Question ID : 2390871424
Status : Answered
Chosen Option : 3

Q.8 The Table shows the number of T-20 matches played, runs scored, 50s and 100s scored by four Indian batsmen in a particular year.

Player	Matches played	Runs scored	50s	100s
Virat	16	900	4	3
Rohit	20	840	5	1
Shikhar	25	1050	6	2
Suresh	12	450	4	0

The difference between average runs per match scored by Shikhar and average runs per match scored by Rohit is:

- Ans
- 1. 0
 - 2. 1
 - 3. 20
 - 4. 18

Question ID : 2390871438
Status : Answered
Chosen Option : 1

Q.9 The compound interest for two years at 12% per annum is ₹477. What is the Principal amount (in ₹) invested?

- Ans
- 1. 2000
 - 2. 1875
 - 3. 1650
 - 4. 1500

Question ID : 2390871429
Status : Answered
Chosen Option : 2

Q.10 A motor car moves at a speed of 72 km/h and 54 km/h after and before repairing respectively. It covers X distance in 6 hours after repairing. How much time (in hours) will it take to cover 5X distance before repairing?

- Ans
- 1. 30
 - 2. 40
 - 3. 45
 - 4. 36

Question ID : 2390871432
Status : Answered
Chosen Option : 2

Q.11 The ratio of the number of rural and urban workers (includes men and women only) in an office is 3 : 2. If 20% of rural and 25% of urban are women, the percentage of men is:

- Ans
- 1. 78%
 - 2. 67.50%

3. 50%
4. 82.50%

Question ID : 2390871426
Status : Answered
Chosen Option : 1

Q.12 The length of the diagonal of a rectangle is 26 cm and one side is 10 cm. The area of the rectangle is:

- Ans
1. 240 cm²
2. 65 cm²
3. 260 cm²
4. 130 cm²

Question ID : 2390871436
Status : Answered
Chosen Option : 1

Q.13 A sport car going at an average speed of 108 km/h takes 15 minutes to complete a lap on a racing track. How much speed (in km/h) should be increased to complete the lap in 9 minutes?

- Ans
1. 100
2. 180
3. 108
4. 72

Question ID : 2390871433
Status : Answered
Chosen Option : 4

Q.14 On selling 36 mobiles, a mobile vendor got a loss equivalent to the selling price of four mobiles. The loss percent is:

- Ans
1. 12.50%
2. 10%
3. 8%
4. 8.50%

Question ID : 2390871423
Status : Answered
Chosen Option : 2

Q.15 The average of all the prime and composite numbers upto 100 is:

- Ans
1. 51
2. 50
3. 49.5
4. 50.5

Question ID : 2390871418
Status : Not Attempted and Marked For Review
Chosen Option : --

Q.16 What is the median of the numbers 29, 27, 32, 23, 18, 18, 32, 31, 28, 15, 35, 30?

- Ans
1. 29.5
2. 28.5

3. 30
4. 30.5

Question ID : 2390871421
Status : Answered
Chosen Option : 2

Q.17 If the ratio of principal and the simple interest for 5 years is 10 : 7, then the rate of interest (per annum) is:

- Ans
- 1. 14%
 - 2. 20%
 - 3. 15%
 - 4. 10%

Question ID : 2390871428
Status : Answered
Chosen Option : 1

Q.18 The value of

$$99 \frac{95}{99} \times 99 - 95 \text{ is:}$$

- Ans
- 1. 9897
 - 2. 9993
 - 3. 9999
 - 4. 9801

Question ID : 2390871416
Status : Answered
Chosen Option : 4

Q.19 The ratio of the sum of the salaries of A and B to the difference of their salaries is 11 : 1. The ratio of the sum of the salaries of B and C to the difference of their salaries is also 11 : 1. If A's salary is the highest and C's is the lowest then what is B's salary (in ₹), given that the total of their salaries is ₹18,200?

- Ans
- 1. 8500
 - 2. 6000
 - 3. 7200
 - 4. 5500

Question ID : 2390871425
Status : Answered
Chosen Option : 2

Q.20 What is the value of:

$$\frac{0.56 \times 0.36 + 0.42 \times 0.32}{0.8 \times 0.21} ?$$

- Ans
- 1. $\frac{3}{2}$
 - 2. 1
 - 3. 2
 - 4. 3

Question ID : 2390871417
Status : Answered
Chosen Option : 3

the weight of the new article?

- Ans
- 1. 11.5 kg
 - 2. 11.0 kg
 - 3. 10.1 kg
 - 4. 15.0 kg

Question ID : 2390871419
Status : Answered
Chosen Option : 1

Q.22 A cuboid of size $100\text{ cm} \times 80\text{ cm} \times 60\text{ cm}$ cut into eight identical parts by three cuts. What is the total surface area (in square cm.) of all the eight parts?

- Ans
- 1. 84100
 - 2. 22500
 - 3. 75200
 - 4. 50750

Question ID : 2390871434
Status : Answered
Chosen Option : 2

Q.23 Aman's annual income has increased by ₹20 lakhs but the tax on income that he has to pay has reduced from 20% to 16%. He now pays the same amount of tax as earlier. What is his new total income (in ₹ lakhs)?

- Ans
- 1. 120
 - 2. 60
 - 3. 100
 - 4. 80

Question ID : 2390871422
Status : Answered
Chosen Option : 3

Q.24 A buys an article at ₹1800 and sells it after giving two successive discounts of 10% and 20%. What will be the selling price (in ₹) of the article?

- Ans
- 1. 1296
 - 2. 1668
 - 3. 1336
 - 4. 1728

Question ID : 2390871420
Status : Answered
Chosen Option : 1

Q.25 The Table shows the number of T-20 matches played, runs scored, 50s and 100s scored by four Indian batsmen in a particular year.

Player	Matches played	Runs scored	50s	100s
Virat	16	900	4	3
Rohit	20	840	5	1
Shikhar	25	1050	6	2
Suresh	12	450	4	0

What is the average of the total number of runs scored by all four batsmen together?

- Ans
- 1. 790

4. 820

3. 810

4. 800

Question ID : 2390871439

Status : Answered

Chosen Option : 3

Section : General awareness

Q.1 Who was the first to experimentally determine the value of the Universal Gravitational Constant (G)?

Ans 1. Henry Cavendish

2. Johannes Kepler

3. Isaac Newton

4. Laurent Freidel

Question ID : 2390871204

Status : Answered

Chosen Option : 1

Q.2 Which part of the Indian Constitution contains the provisions on the Union Territories?

Ans 1. Part - VIII

2. Part - VII

3. Part - IX

4. Part - IXB

Question ID : 2390871202

Status : Answered

Chosen Option : 1

Q.3 The Ramsar Convention is the intergovernmental treaty that provides the framework for the conservation of _____.

Ans 1. Tribal Language

2. Tiger

3. Traditional Seeds

4. Wetlands

Question ID : 2390871211

Status : Answered

Chosen Option : 4

Q.4 Bhavisha Singh is associated to which of the following sport?

Ans 1. Volley ball

2. Badminton

3. Karate

4. Table Tennis

Question ID : 2390871194

Status : Not Answered

Chosen Option : --

Q.5 Which of the following Trophy/cup is associated with the game 'Bridge'?

Ans 1. Jai Laxmi Cup

2. Amit Diwan T

- 3. Thomas Cup
- 4. Holkar Trophy

Question ID : 2390871193
Status : Answered
Chosen Option : 1

Q.6 Who attacked Somnath Temple of Gujarat?

- Ans
- 1. Ibrahim Lodi
 - 2. Jalal-ud-din Khalji
 - 3. Ahmad Shah Durrani
 - 4. Mahmud of Ghazni

Question ID : 2390871213
Status : Answered
Chosen Option : 4

Q.7 "Bhuta Song" belongs to which of the following Indian State?

- Ans
- 1. Kerala
 - 2. Tamil Nadu
 - 3. Uttar Pradesh
 - 4. Bihar

Question ID : 2390871190
Status : Not Answered
Chosen Option : --

Q.8 How many members were there in the drafting committee of Indian Constitution?

- Ans
- 1. 5
 - 2. 10
 - 3. 7
 - 4. 3

Question ID : 2390871201
Status : Not Attempted and Marked For Review
Chosen Option : --

Q.9 Former President Pranab Mukherjee won the first Lok Sabha Election in the year

- Ans
- 1. 1980
 - 2. 1991
 - 3. 2004
 - 4. 1998

Question ID : 2390871197
Status : Not Answered
Chosen Option : --

Q.10 Which of the following is a traditional theatre form of Haryana?

- Ans
- 1. Nautanki
 - 2. Tamaasha
 - 3. Dashavatar
 - 4. Swang

Question ID : 2390871191
Status : Answered
Chosen Option : 3

Q.11 Green revolution is related to _____ .

- Ans
- 1. Production of milk
 - 2. Production of barley
 - 3. Production of coffee
 - 4. Production of wheat

Question ID : 2390871200
Status : Answered
Chosen Option : 4

Q.12 Khadar is _____ .

- Ans
- 1. A crop
 - 2. New alluvial soil
 - 3. Old alluvial soil
 - 4. Type of laterite soil

Question ID : 2390871209
Status : Answered
Chosen Option : 2

Q.13 When was the Central Rural Sanitation Programme launched?

- Ans
- 1. 1982
 - 2. 1986
 - 3. 1990
 - 4. 1975

Question ID : 2390871205
Status : Not Answered
Chosen Option : --

Q.14 What is the full form of MOU?

- Ans
- 1. Memorandum of Understanding
 - 2. Monetary of Union Territory
 - 3. Memory of Understanding
 - 4. Memory of Undertaking

Question ID : 2390871198
Status : Answered
Chosen Option : 1

Q.15 Which of the following is NOT a Nationalized bank?

- Ans
- 1. Allahabad Bank
 - 2. Bandhan Bank
 - 3. Dena Bank
 - 4. Punjab National Bank

Question ID : 2390871199
Status : Answered
Chosen Option : 2

Q.16 Daojali Hading, the neolithic site is located in _____.

- Ans
- 1. Meghalaya
 - 2. Jammu and Kashmir
 - 3. Assam
 - 4. Karnataka

Question ID : 2390871212
Status : Not Answered
Chosen Option : --

Q.17 "Bhagirathi" is a headstream of which of the following river?

- Ans
- 1. Indus
 - 2. Brahmaputra
 - 3. Narmada
 - 4. Ganga

Question ID : 2390871210
Status : Answered
Chosen Option : 4

Q.18 Which of the following is NOT an unsaturated carbon compound?

- Ans
- 1. Pentene
 - 2. Acetylene
 - 3. Benzene
 - 4. Butane

Question ID : 2390871206
Status : Not Answered
Chosen Option : --

Q.19 "Garha Katanga" was the kingdom of which of the following tribe?

- Ans
- 1. Baiga
 - 2. Bhil
 - 3. Kolis
 - 4. Gond

Question ID : 2390871214
Status : Not Answered
Chosen Option : --

Q.20 Who is writer of the book 'Anandmath'?

- Ans
- 1. Bankim Chandra Chattopadhyay
 - 2. Annie Besant
 - 3. Dadabhai Naoroji
 - 4. Atal Bihari Bajpayee

Question ID : 2390871196
Status : Answered
Chosen Option : 1

Q.21 As of June 2019, who is the present Defence Minister of India?

- Ans
- 1. Smt. Nirmala Sitharaman
 - 2. Amit Shah

- 3. Rajan Ranua
- 4. Rajnath Singh

Question ID : 2390871203
Status : Answered
Chosen Option : 4

Q.22 As of June 2019 who is the CEO of Nokia?

- Ans
- 1. Satya Nadela
 - 2. Rajeev Suri
 - 3. Francisco D' Souza
 - 4. Sanjay Mehrotra

Question ID : 2390871195
Status : Answered
Chosen Option : 2

Q.23 Minjar Mela is a popular fair of which of the following states?

- Ans
- 1. Uttarakhand
 - 2. Punjab
 - 3. Jammu & Kashmir
 - 4. Himachal Pradesh

Question ID : 2390871192
Status : Not Answered
Chosen Option : --

Q.24 Which micronutrient is supplied by soil to plant?

- Ans
- 1. Calcium
 - 2. Nitrogen
 - 3. Zinc
 - 4. Phosphorous

Question ID : 2390871207
Status : Answered
Chosen Option : 2

Q.25 Which of the following countries is known as country of wind?

- Ans
- 1. Portugal
 - 2. China
 - 3. Denmark
 - 4. France

Question ID : 2390871208
Status : Not Answered
Chosen Option : --



Latest Sarkari jobs, Govt Exam alerts, Results and Vacancies

- ▶ Latest News and Notification
- ▶ Exam Paper Analysis
- ▶ Topic-wise weightage
- ▶ Previous Year Papers with Answer Key
- ▶ Preparation Strategy & Subject-wise Books

To know more [Click Here](#)



www.prepp.in