




Practice, Learn and Achieve  
Your Goal with Prepp

# SSC CPO Exam

Previous Year Question Paper with Answer

Simplifying  
Government Exams



[www.prepp.in](http://www.prepp.in)

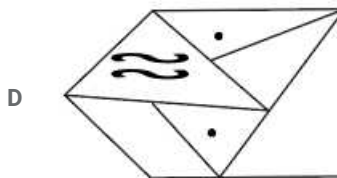
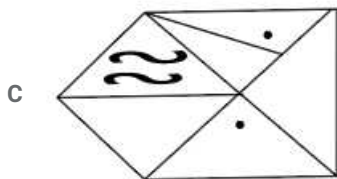
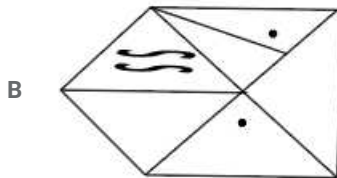
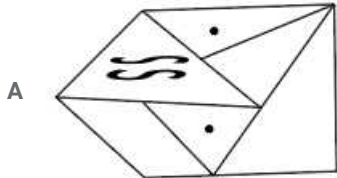
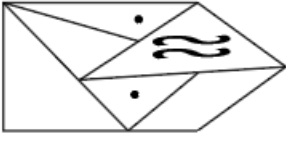
# Reasoning

## Instructions

For the following questions answer them individually

### Question 1

Select the correct mirror image of the given figure when the mirror is placed on the right of the figure.



Answer: A

### Question 2

Which two numbers should be interchanged to make the given equations correct?

$$6 \times 3 - 8 \div 2 + 5 = 8 \div 2 + 3 \times 5 - 6$$

A 6 and 2

B 8 and 6

C 3 and 5

D 5 and 6

Answer: D

**Question 3**

Select the word-pair in which the two words are related in the same way as are the two words in the following word-pair.

Request : Order

- A Summer : Heat
- B Think : Thought
- C Whisper : Shout
- D Clean : Wash

Answer: C

**Question 4**

Select the correct alternative to indicate the arrangement of the following words in a logical and meaningful order.

1. Probation
2. Selection
3. Application
4. Confirmation
5. Appointment

- A 3, 2, 5, 4, 1
- B 4, 1, 3, 2, 5
- C 3, 2, 5, 1, 4
- D 5, 1, 4, 2, 3

Answer: C

**Question 5**

'Meat' is related to 'Vegetarian' in the same way as 'Alcohol' is related to '.....'

- A Water
- B Smoker
- C Dietician
- D Teetotaller

Answer: D

**Question 6**

'Tuesday' is related to 'Mars' in the same way as 'Thursday' is related to '.....'

- A Venus
- B Saturn
- C Jupiter
- D Mercury

Answer: C

Question 7

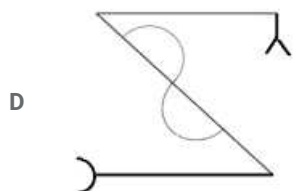
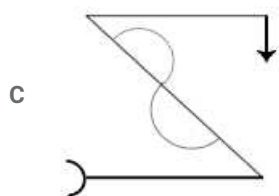
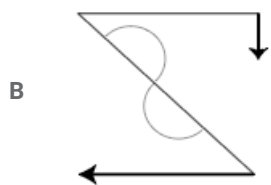
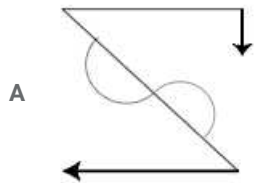
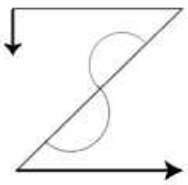
Which letter will replace the question mark (?) in the following series?  
M, N, O, L, Q, J, ?, H

- A J
- B R
- C K
- D S

Answer: D

Question 8

Select the correct mirror image of the given figure when the mirror is placed on the right of the figure.



Answer: B

**Question 9**

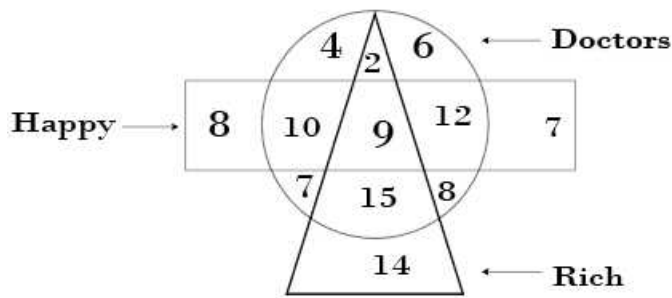
In a code language, QUESTION is written as OPJUTFVR. How will FACTOR be written as in that language?

- A SUPEGB
- B QPUDBE
- C BGDSPU
- D SPUDBG

Answer: D

**Question 10**

In the following diagram, the triangle represents 'rich', the circle represents 'doctor' and the rectangle represents 'happy' persons. The numbers in different segments show the number of persons.



How many rich doctors are not happy?

- A 15
- B 17
- C 9
- D 26

Answer: B

**Question 11**

Which fraction will replace the question mark (?) in the following series?

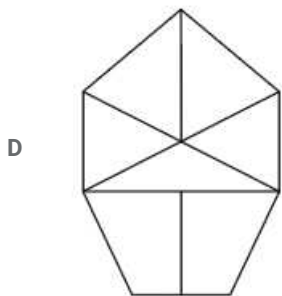
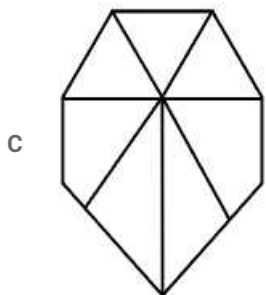
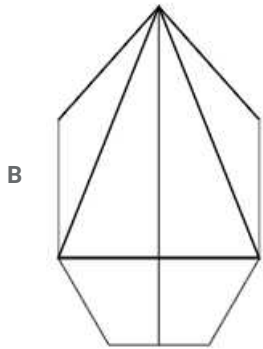
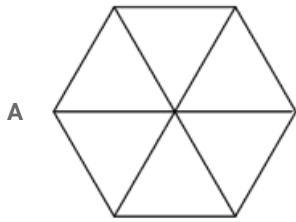
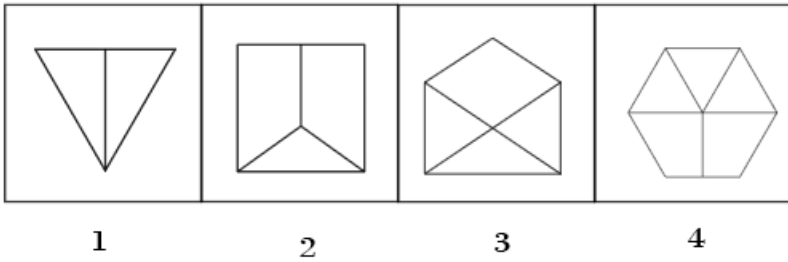
$\frac{1}{4}, \frac{3}{5}, \frac{6}{7}, \frac{10}{11}, ?$

- A  $\frac{17}{27}$
- B  $\frac{17}{21}$
- C  $\frac{15}{19}$
- D  $\frac{15}{23}$

Answer: C

Question 12

Select the figure that will come next in the following figure series.



Answer: B

Question 13

Three of the following four number-pairs are alike in a certain way and one is different. Find the odd one out.

- A 14 : 94
- B 12 : 72
- C 6 : 18
- D 8 : 32

Answer: A

**Question 14**

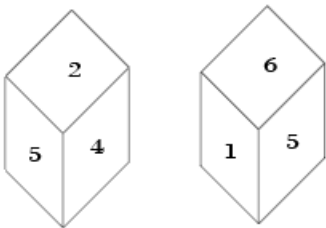
Three of the following four letter-clusters are alike in a certain way and one is different. Find the odd one out.

- A AEIU
- B ILOU
- C EIOU
- D AIOU

Answer: B

**Question 15**

Two positions of the same dice are given. Which number will be at the top if '6' is at the bottom?



- A 4
- B 2
- C 1
- D 3

Answer: A

**Question 16**

Select the option that is related to the third term in the same way as the second term is related to the first term.  
BYWD : DWUF :: AZYB : .....

- A CXWD
- B CXVB
- C BZXC
- D BYWE

Answer: A

Question 17

If CAB = 12 and FED = 30, then HIDE =

A 44

B 52

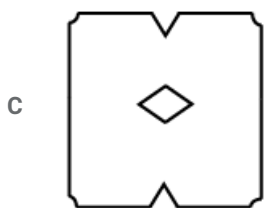
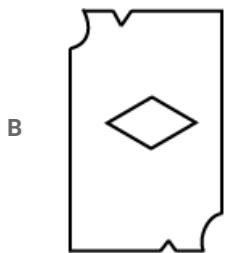
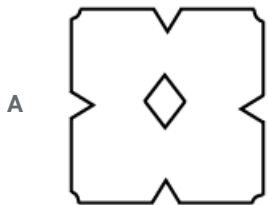
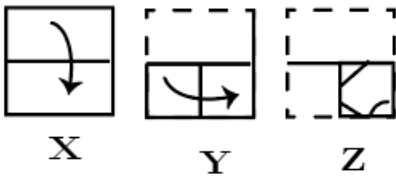
C 68

D 48

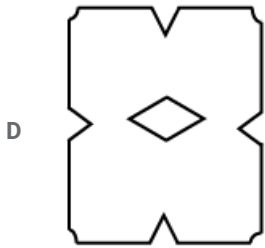
Answer: B

Question 18

The sequence of folding a piece of square paper and the manner in which the folded paper has been cut is shown in the 8 figures X, Y and Z. How would this paper look when unfolded?







Answer: C

Question 19

How many triangles are there in the following figure?



A 12

B 8

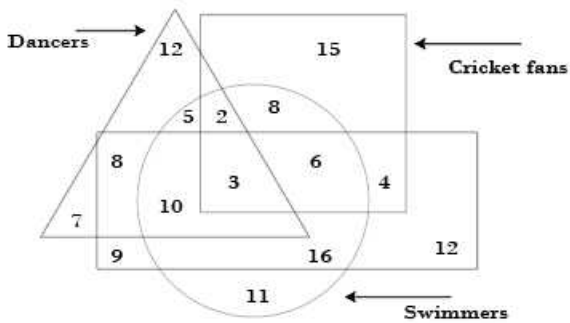
C 14

D 10

Answer: A

Question 20

In the following diagram, the triangle represents 'dancers', the circle represents 'swimmers', the rectangle represents 'students' and the square represents 'cricket fans'. The numbers in different segments show the number of persons.



How many student dancers are swimmers but not cricket fans?

A 13

B 3

C 15

D 10

Answer: D

**Question 21**

Three of the following four number-pairs are alike in a certain way and one is different. Find the odd one out.

A 34 : 7

B 18 : 9

C 56 : 11

D 78 : 13

Answer: D

**Question 22**

Two statements are given, followed by three conclusions numbered I, II and III. Assuming the statements to be true, even if they seem to be at variance with commonly known facts, decide which of the conclusions logically follow(s) from the statements.

**Statements:**

Some plants are trees.

All trees are bushes.

**Conclusions:**

I. Some bushes are plants.

II. All bushes are plants.

III. No bush is a plant.

A Only conclusion I follows.

B Only conclusions II and III follow.

C Only conclusion III follows.

D Only conclusions I and III follow.

Answer: A

**Question 23**

Three of the following four number-pairs are alike in a certain way and one is different. Find the odd one out.

A 10 : 99

B 9 : 82

C 4 : 17

D 5 : 26

Answer: A

**Question 24**

Select the set of numbers that is similar to the following set of numbers.

{15, 21, 27}

A {40, 55, 75}

B {20, 28, 36}

C {25, 40, 56}

D {12, 24, 32}

**Answer: B**

**Question 25**

Select the set of numbers that is similar to the following set of numbers.  
{17, 13, 20}

A {12, 19, 29}

B {10, 18, 24}

C {9, 15, 23}

D {4, 10, 17}

**Answer: D**

**Question 26**

Select the word-pair in which the two words are related in the same way as are the two words in the following word- pair.  
Memory : Amnesia

A Vision : Blindness

B Oldage : Senility

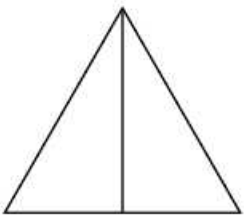
C Audition : Hearing

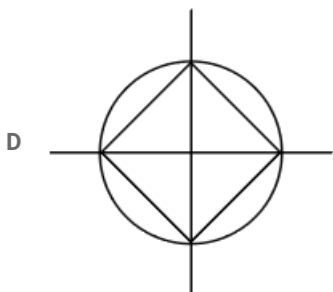
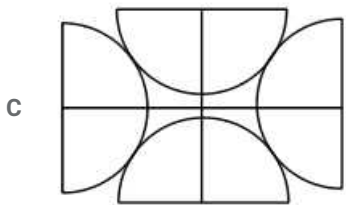
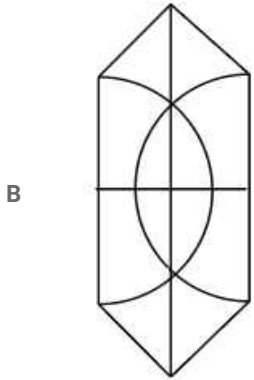

D Cholera : Epidemic

**Answer: A**

**Question 27**

Select the option in which the given figure is embedded.





Answer: D

**Question 28**

Which number will replace the question mark (?) in the following series?

7, 10, 16, 19, 25, ?

A 31

B 29

C 33

D 28

Answer: D

**Question 29**

Select the word that will be odd in the following series.

- A Ruskin Bond
- B Jaswant Singh
- C Javier Moro
- D Preet Singh

**Answer:** D

**Explanation:**

Except Preet Singh all others are famous authors

**Question 30**

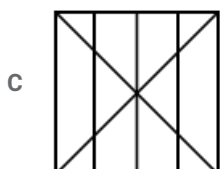
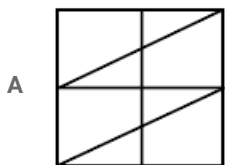
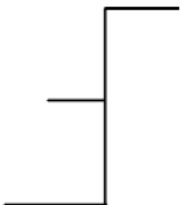
Select the option that is related to the third number in the same way as the second number is related to the first number.  
15 : 25 :: 24 : .....

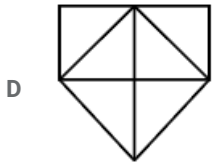
- A 45
- B 32
- C 35
- D 40

**Answer:** D

**Question 31**

Select the option in which the given figure is embedded.





Answer: A

### Question 32

Which two signs should be interchanged to make the given equation correct?

$$4 + 8 \times 12 \div 6 - 4 = 8$$

- A - and +
- B  $\div$  and -
- C  $\times$  and +
- D + and  $\div$

Answer: D

### Question 33

Three of the following four number-pairs are alike in a certain way and one is different. Find the odd one out.

- A 8 : 25
- B 5 : 15
- C 9 : 23
- D 14 : 33

Answer: A

### Question 34

Select the option that is related to the third number in the same way as the second number is related to the first number.

$$8 : 81 :: 10 : \dots$$

- A 121
- B 120
- C 111
- D 100

Answer: A

### Question 35

Which letter-cluster will replace the question mark (?) in the following series?

BZD, DXF, GUI, ?, PLR

- A LRT
- B KPN
- C KQM
- D MOQ

Answer: C

**Question 36**

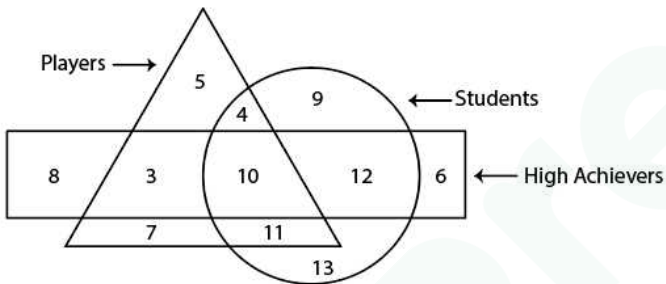
If HECK is coded as 94410 and DIG is coded as 588, then how will BIKE be coded as?

- A 38124
- B 19113
- C 38115
- D 39105

Answer: A

**Question 37**

In the following diagram, the triangle represents 'players', the circle represents 'students' and the rectangle represents 'high achievers'. The numbers in different segments show the number of persons.



How many high-achieving students are not players?

- A 13
- B 15
- C 3
- D 12

Answer: D

**Question 38**

Select the option that is related to the third term in the same way as the second term is related to the first term.  
BDFH : DWDS :: TVYZ : .....

- A VEBB
- B UDWA
- C VDWB

D VEWA

Answer: D

**Question 39**

Select the correct alternative to indicate the arrangement of the following words in a logical and meaningful order.

1. Sleep
2. Cold
3. Blanket
4. Winter
5. Warm
6. Shop

A 4, 3, 2, 6, 1, 5

B 4, 2, 6, 3, 5, 1

C 6, 3, 2, 1, 4, 5

D 4, 3, 6, 2, 1, 5

Answer: B

**Question 40**

Three of the following four words are alike in a certain way and one is different. Find the odd one out.

A Gardening

B Tailor

C Blacksmith

D Carpenter

Answer: A

**Question 41**

In a code language, BANKER is written as NABREK. How will STRING be written as in that language?

A RTSGNI

B RSTGIN

C TSIRGN

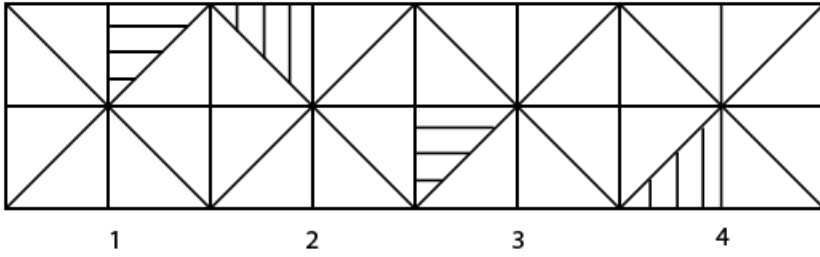
D RTGSNI

Answer: A



Question 42

Select the figure that will come next in the following figure series.



- A
- B
- C
- D

Answer: B

Question 43

Which number will replace the question mark (?) in the following series?

3, 5, 7, 8, 15, ?, 31, 26

- A 18
- B 14
- C 24
- D 21

Answer: B

**Question 44**

Which of the following interchanges of signs and numbers would make the given equation correct?

$$8 \div 2 - 6 \times 4 + 3 = 13$$

A  $\div$  and  $+$ , 4 and 8

B  $-$  and  $+$ , 6 and 4

C  $\times$  and  $-$ , 2 and 6

D  $\times$  and  $\div$ , 8 and 6

**Answer: D**

**Question 45**

Three of the following four letter-clusters are alike in a certain way and one is different. Find the odd one out.

A MKOH

B CLEH

C TRVN

D PYRU

**Answer: A**

**Question 46**

Select the number-pair in which the two numbers are related in the same way as are the two numbers of the given number pair.

5 : 9

A 10 : 29

B 12 : 33

C 25 : 79

D 17 : 65

**Answer: D**

**Question 47**

Two statements are given, followed by three conclusions numbered I, II and III. Assuming the statements to be true, even if they seem to be at variance with commonly known facts, decide which of the conclusions logically follow(s) from the statements.

**Statements:**

Some mangoes are fruits.

No fruit is vegetable.

**Conclusions:**

I. Some mangoes are vegetables.

II. Some fruits are mangoes.

III. No vegetable is a mango.

- A Only conclusions II and III follow.
- B Only conclusion II follows.
- C Only conclusion I follows.
- D Only conclusions I and III follow.

**Answer: B**

**Question 48**

Three of the following four words are alike in a certain way and one is different. Find the odd one out.

- A Weep
- B Jealous
- C Angry
- D Sad

**Answer: A**

**Question 49**

Priya's school bus was facing north-west when it reached her school. After starting from her house, the bus took one left turn, one right turn and another left turn to reach her school. In which direction was the bus facing when it left Priya's house?

- A North-West
- B North-East
- C South-East
- D South-West

**Answer: B**

**Question 50**

After starting from her house, Sameera walked a few metres towards the East. From there, she took a right turn and walked 100 m, and then took a left turn and walked 30 m. Finally, she took a left turn again and walked 40 m to reach the market. If the air distance between her house and the market is 100 m. how far did Sameera walk towards the East initially from her house?

- A 30 m
- B 80 m
- C 60 m
- D 50 m

**Answer: D**

## General knowledge

### Instructions

For the following questions answer them individually

#### Question 51

In January 2019, the Department of Science and Technology partnered with Doordarshan to launch two free-to-air channels DD Science and an Internet-based channel ..... which will offer live, scheduled play and video-on-demand on science topics.

- A India Science
- B Internet Science
- C India Technology
- D India Live

**Answer: A**

#### Question 52

The smallest Union Territories is .....

- A Puduchery
- B Daman and Diu
- C Dadra and Nagar Haveli
- D Lakshadweep

**Answer: D**

#### Question 53

The Governor of Tamil Nadu Banwarilal Purohit presented the 'Sansad Ratna Awards' in Chetmai in January 2019. Which of the following MPs is NOT a recipient of Sansad Ratna Award?

- A Supriya Sule
- B Kirit Solanki
- C N K Premachandran
- D Nishikant Dubey

**Answer: B**

#### Question 54

In January 2019, Prime Minister Narendra Modi inaugurated and laid the foundation stone for several development projects at Silvassa in Dadra and Nagar Haveli. Which of the following is NOT one of them?

- A Door to door waste collection, segregation and processing of solid waste in Dadra and Nagar Haveli digitally
- B New IT policy for Dadra and Nagar Haveli
- C A medical college in Dadra and Nagar Haveli
- D An arts college in Dadra and Nagar Haveli

**Answer: D**

**Question 55**

**The audible range of sound for human beings is from:**

- A 20 Hz to 200 kHz
- B 10 Hz to 10 kHz
- C 20 Hz to 20 kHz
- D 10 Hz to 100 kHz

**Answer: C**

**Question 56**

**The Hindu Prize 2018 for Fiction was awarded to ..... , the English author of 'Requiem in Raga Mind' during the The Hindu Lit for Life 2019.**

- A Neelum Saran Gour
- B Vinayak Vanua
- C Rajiv Elipe
- D Mamta Nainy

**Answer: A**

**Question 57**

**Queen Naikidevi is remembered as the woman who defeated ..... in 1178 CE.**

- A Muhammad bin Tughlaq
- B Al-Salih Muhammad
- C Muhammad al-Baqir
- D Muhammad Ghori

**Answer: D**

**Question 58**

**Where is the Dachigam sanctuary located?**

- A Assam
- B Jammu and Kashmir
- C Chhattisgarh
- D Karnataka

**Answer: B**

**Question 59**

**A study by Gitanjali Katlam and Souniya Prasad from Jawaharlal Nein University, Mohit Agatwal from Asian Adventures and Raman Kumar from Nature Science Initiative examined the relationship between ..... which was published in the journal 'Oirrent Science'.**

- A different animal species and their food
- B animal and plant life
- C animal type and behavior vis-a-vis the risk of plastic ingestion
- D water scarcity and animals

**Answer: C**

**Question 60**

**The ..... dance form originated as a tribal dance in the forests of Odisha in the 18<sup>th</sup> century and attained the status of a martial art-based dance form in the 19<sup>th</sup> century.**

- A Kalaripayattu
- B Chhobia
- C Bawai
- D Chhau

**Answer: D**

**Question 61**

**Indian teen ..... cyclist created history by winning the country's maiden medal in track cycling at the world level in 2018.**

- A Esow Alben
- B Bikram Singh
- C Sreedhar Savanur
- D Deborah Herold

**Answer: A**

**Question 62**

**The sky appears blue due to:**

- A Reflection of light
- B Scattering of light
- C Dispersion of light
- D Refraction of light

**Answer: B**

**Question 63**

The Treaty of Sagauli was signed between the British and the .....

- A Gurkhas
- B Nawab of Bengal
- C Nawab of Awadh
- D Marathas

**Answer: C**

**Question 64**

Who was the Governor General of India during the first Anglo-Sikh War?

- A Lord Dalhousie
- B Lord Canning
- C Lord Hardinge
- D Lord Cornwallis

**Answer: C**

**Question 65**

In September 2018, India's ace sprinter ..... was appointed as Sports Ambassador of Assam.

- A Anand Shetty
- B Hima Das
- C Tata Shankar
- D Makhan Singh

**Answer: B**

**Question 66**

'.....' is aimed at the welfare of areas and people affected by mining-related operations. using the funds generated by District Mineral Foundations (DMFs).

- A Pradhan Mantri UjjWala Yojana
- B Pradhan Mantri Kaushal Vikas Yojana
- C Pradhan Mantri Digidhan Vyapar Yojana
- D Pradhan Mantri Khanij Kshetra Kalyan Yojana

**Answer: D**

**Question 67**

**Olfactory receptors are located in our:**

- A Eyes
- B Ears
- C Tongue
- D Nose

**Answer: D**

**Question 68**

**'Rauf' is a folk dance associated with the state of .....**

- A Jammu and Kashmir
- B Rajasthan
- C Haryana
- D Punjab

**Answer: A**

**Question 69**

**The first Sheikh Saud International Prize for Materials Research has been awarded to ..... who is an Indian scientist in January 2019.**

- A Vikram Sarabhai
- B M Visvesvaraya
- C Meghnad Saha
- D Chintamani Nagesa Ramachandra Rao

**Answer: D**

**Question 70**

**Article ..... of the Constitution of India states that the Judge of a High Court shall be appointed by the President with 0 the consultation of the Chief Justice of India and the Governor of the State.**

- A 72
- B 21
- C 217
- D 201

**Answer: C**



**Question 71**

The five kingdom concept of classification of organisms was given by:

- A Carl Woese
- B Robert Whittaker
- C William Paley
- D Charles Darwin

**Answer: B**

**Question 72**

Swadeshi Movement started in India during .....

- A The Champaran Satyagrah of Gandhi
- B The protest against Rowlatt Act
- C The first non-co-operation movement of 1919-22
- D Anti-Bengal Partition agitation

**Answer: D**

**Question 73**

Dadra and Nagar Haveli is a union territory located between the states of Maharashtra and .....

- A Andhra Pradesh
- B Uttarakhand
- C West Bengal
- D Gujarat

**Answer: D**

**Question 74**

..... is are being considered an alternative to reduce the country's crude oil imports worth 27 lakh crore. It They can also be a potential weapon to fight increasing pollution.

- A Air purifiers
- B Biofuels
- C Extractor fans
- D Phytoremediation

**Answer: B**

**Question 75**

..... is the study of viruses.

- A Parasitology
- B Virology
- C Protozoology
- D Mycology

**Answer: B**

**Question 76**

Apiculture is the technique of scientific rearing of ..... in a specially designed wooden box.

- A Silkworms
- B Termites
- C Honey bees
- D Moths

**Answer: C**

**Question 77**

..... has become the youngest man in the world to have scaled seven highest peaks and volcanic summits across continents.

- A Santosh Yadav
- B Satyarup Siddhanta
- C Raj Singh Dharmashaktu
- D Mohan Singh

**Answer: B**

**Question 78**

The Battle of Chausa was fought between Humayun and Slier Shah Suri on 26 June in the year .....

- A 1639
- B 1539
- C 1729
- D 1440

**Answer: B**

**Question 79**

The spectrum of light was first explained by .....

- A Isaac Newton
- B Neils Bohr
- C Galileo Galilei
- D Albert Einstein

**Answer: A**

**Question 80**

..... has emerged as the world's most dynamic city among 131 major established and emerging business hubs globally as per JLL City Momentum Index 2019.

- A Bengalurn
- B Delhi
- C Hyderabad
- D Chennai

**Answer: A**

**Question 81**

**Why do water droplets always take a round shape when dropped onto plane surfaces?**

- A Due to the presence of Eddy Currents in the air
- B Due to atmospheric pressure
- C Due to gravity
- D Due to exersion of surface tension by the molecules

**Answer: D**

**Question 82**

**Which of the following statements is NOT true about the Export-Import Bank of India (EXIM Bank)?**

- A Its main objective is to provide financial assistance to promote Indian exports.
- B It is a premier export finance institution of India.
- C It was established in 2014 under the Export-Import Bank of India Act.
- D The Bank provides assistance in helping Indian firms in their globalization efforts

**Answer: C**

**Question 83**

**Pune-based organisation ..... conducted a study using a 15% M-15 methanol blend in vehicles and tested them for 3,000 km to evaluate emissions in real-world conditions as well as to check the performance of the vehicles.**

- A Automotive Research Association of India (ARAI)

- B Research Association of India (RAI)
- C Automotive Organisation (AO)
- D Vehicle Organisation of India (VOI)

**Answer: A**

**Question 84**

**Who inaugurated the National Museum of Indian Cinema in Mumbai in Jan 2019.**

- A Narendra Modi
- B Amitabh Bachehan
- C Ram Nath Kovind
- D Devendra Fadnavis

**Answer: A**

**Question 85**

**Which Bharatiya Janata Party leader was bestowed with 'Sansad Ratna Award' for distinguished performance as a parliamentarian in January 2019?**

- A Rao Inderjit Singh
- B Virendra Kashyap
- C Anurag Thakur
- D Rajesh Chudasama

**Answer: C**

**Question 86**

**In January 2019, the Competition Commission of India (CCI) approved a deal wherein Samara Capital-backed witzig 6 Advisory Services and Amazon will acquire ..... which operates a supermarket store chain called 'More'.**

- A Future Group
- B Godrej Consumer Products Ltd
- C Reliance Retail
- D Aditya Birla Retail Ltd

**Answer: D**

**Question 87**

**In January 2019, Microsoft India launched a new e-commerce platform called 're-weave.in' under Project ReWeave to aid hand loom weavers in Telangana. Which of the following is NOT a benefit of the e-commerce platform?**

- A It will decelerate the process of reviving traditional forgotten Indian art.
- B It will connect artisans to the buyers directly, enabling them to expand to newer customers and markets.

- C It will help weavers increase their income and earn a sustainable livelihood.
- D It will showcase signature collections created by the weaver communities.

**Answer: A**

#### Question 88

The Nobel Prize is awarded in 6 categories each year. Which of the following is NOT one of them?

- A Mathematics
- B Literature
- C Physics
- D Economics

**Answer: A**

#### Question 89

In January 2019, the Union Ministry of ..... started a 'Know Your Budget' series on its "iTwitter handle to educate the general public about the budgetary process.

- A Corporate Affairs
- B Human Resource Development
- C Finance
- D Commerce and Industry

**Answer: C**

#### Question 90

A not-for-profit organisation 'Youth for Equality' has moved the Supreme Court by questioning the constitutional validity of the ..... Constitutional Amendment Act which provides 10% quota for economically weaker sections.

- A 100<sup>th</sup>
- B 143<sup>rd</sup>
- C 99<sup>th</sup>
- D 103<sup>rd</sup>

**Answer: D**

#### Question 91

In January 2019, the Union Cabinet headed by Prime Minister Narendra Modi approved a capital infusion of ₹ ..... in state-owned Export-Import Bank of India (EXIM Bank) to expand its business.

- A 9,000 crore

- B 2,000 crore
- C 6,000 crore
- D 4,000 crore

**Answer: C**

**Question 92**

**Which team has won the inaugural Pro Volleyball League Title held in February 2019?**

- A Ahmedabad Defenders
- B Black Hawks Hyderabad
- C Chennai Spartans
- D Calicut Heroes

**Answer: C**

**Question 93**

**The famous festival of 'Tsokun Samai' is celebrated by the people of which state to invoke blessings for a rich harvest?**

- A Nagaland
- B Meghalaya
- C Mizoram
- D Assam

**Answer: A**

**Question 94**

**As of January 2019, who holds the portfolio of Ministry of Science and Technology?**

- A Manohar Parrikar
- B Harsh Vardhan
- C Pivush Goval
- D Prakash Javadekar

**Answer: B**

**Question 95**

**Which of the following states does NOT share a border with Bangladesh?**

- A Tripura
- B Manipur
- C Meghalaya

D Mizoram

**Answer: B**

**Question 96**

**"The Origin of Species" was written by**

A William Paley

B Charles Darwin

C Erasmus Darwin

D Carolus Linnaeus

**Answer: B**

**Question 97**

**The Maharana Pratap Sagar reservoir on the river Beas in Himachal Pradesh is also known as .....**

A Ukai Dam

B Tehri Dam

C Polly Dam

D Dharoi Dam

**Answer: C**

**Question 98**

**What was the paternal name of Swami Dayanand Saraswati?**

A Krishna Shankar

B Mool Shankar

C Om Shankar

D Narayan Shankar

**Answer: B**

**Question 99**

**Under which of the following acts did the Government of India set up Telecom Regulatory Authority of India (TRAI)?**

A Telecom Regulatory Authority of India Act, 2003

B Telecom Regulatory Authority of India Act, 2001

C Telecom Regulatory Authority of India Act, 1997

D Telecom Regulatory Authority of India Act. 2005

**Answer: C**

**Question 100**

In December 2018, ..... won the Women's Singles title at the National Squash Championship held in Delhi.

- A Bhuvaneshwari Kumari
- B Joshna Chinappa
- C Sachika Balvani
- D Aparajitha Balamurukan

**Answer: B**

## Quant

**Instructions**

For the following questions answer them individually

**Question 101**

The efficiencies of A, B and C are in the ratio 4 : 5 : 6. Working together, they can complete a work in 12 days. In how many days will A alone be able to complete that work?

- A 30
- B 45
- C 40
- D 36

**Answer: B**

**Question 102**

A sphere of radius 6 cm is melted and recast into spheres of radius 2 cm each. How many such spheres can be made?

- A 25
- B 36
- C 24
- D 27

**Answer: D**

**Question 103**

If the six digit number  $4x4y96$  is divisible by 88, then what will be the value of  $(x + 2y)$ ?

- A 11



- B 12
- C 13
- D 10

Answer: C

**Question 104**

If A's income is 40 % more than the income of B. then what percentage of B's income is less than income of A?

- A  $27\frac{4}{7}\%$
- B  $28\frac{5}{7}\%$
- C  $27\frac{5}{7}\%$
- D  $28\frac{4}{7}\%$

Answer: D

**Question 105**

If a train runs at 60 km/h, it reaches its destination 15 minutes late. But, if it runs at 80 km/h. it is late by 7 minutes only. The right time for the train to cover its journey is:

- A 17 minutes
- B 18 minutes
- C 20 minutes
- D 21 minutes

Answer: A

**Question 106**

From the top of a 10 m high building, the angle of elevation of the top of a tower is  $60^\circ$  and the angle of depression of the foot of the tower is  $\phi$ , such that  $\tan \phi = \frac{2}{3}$ . What is the height of the tower to nearest metres?

- A 35 m
- B 36 m
- C 34 m
- D 33 m

Answer: B

**Question 107**

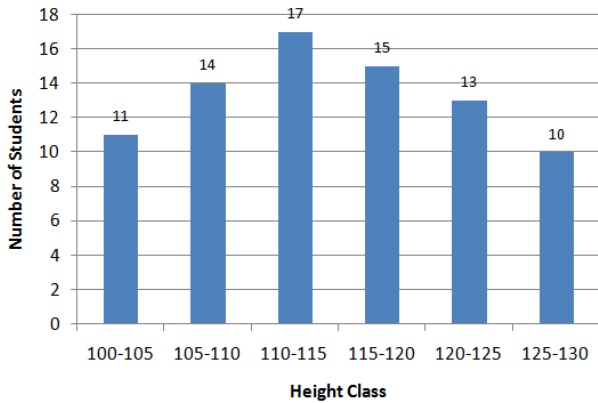
A sum off ₹ 20,000 is invested for 15 months at the interest of 10% per annum compounded half yearly. What is the percentage gain, correct to one decimal place, at the end of 15 months?

- A 13.6%

- B 13.4%
- C 13.0%
- D 12.5%

Answer: C

Question 108



In the given histogram, what is the mean height of all students correct to one decimal place?

- A 116.8 cm
- B 116.2 cm
- C 115.6 cm
- D 114.7 cm

Answer: D

Question 109

$PA$  and  $PB$  are two tangents to a circle with centre  $O$ . from a point  $P$  outside the circle.  $A$  and  $B$  are points on the circle. If  $\angle APB = 40^\circ$ , then  $\angle OAB$  is equal to:

- A  $20^\circ$
- B  $40^\circ$
- C  $25^\circ$
- D  $50^\circ$

Answer: A

Question 110

Two pipes A and B can fill a tank in 6 hours and 9 hours respectively. They are opened alternately for 1 hour each, starting with pipe A first. In how many hours will the tank be filled ?

- A 6
- B 5
- C 4

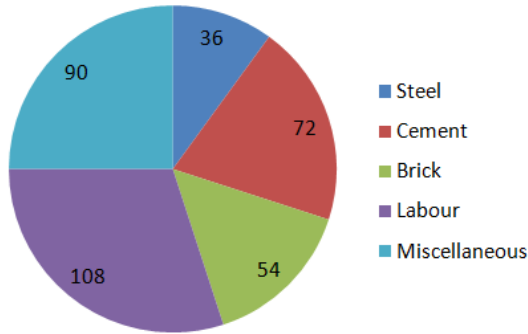
D 7

Answer: D

### Instructions

Read the given pie-chart and answer the questions below.

Degree of Cost incurred in different Expenditure (Total ₹ 4,50,000)



### Question 111

what is the total expenditure (in percent) on labour charges?

- A 25%
- B 30%
- C 18%
- D 20%

Answer: B

### Question 112

the expenditure on steel is what percent of the expenditure on cement?

- A 55%
- B 40%
- C 50%
- D 45%

Answer: C

### Instructions

For the following questions answer them individually

### Question 113

If  $\triangle ABC \sim \triangle QPR$ ,  $\frac{ar(\triangle ABC)}{ar(\triangle PQR)} = \frac{9}{4}$ ,  $AC = 12cm$ ,  $AB = 18cm$  and  $BC = 15cm$  then  $PR$  is equal to:

- A 12 cm
- B 8 cm
- C  $\frac{20}{3}$  cm

D 10 cm

Answer: D

**Question 114**

In an examination, 54 % of the candidates passed in science and 42 % failed in mathematics. If 32% failed in both 14 subjects, what percentage passed in both subjects?

A 32%

B 56%

C 44%

D 48%

Answer: C

**Question 115**

A sum of ₹ 15,000 is invested partly at 12% per annum and the remaining at 10% per annum simple interest. If the total interest at the end of 2 years is ₹ 3,344 how much money was invested at 10% per annum

A ₹ 6,600

B ₹ 6,400

C ₹ 6,200

D ₹ 6,500

Answer: B

**Question 116**

The side of a rhombus is 5 cm and one of its diaconal is 8 cm. What is the area of the rhombus?

A  $40 \text{ cm}^2$

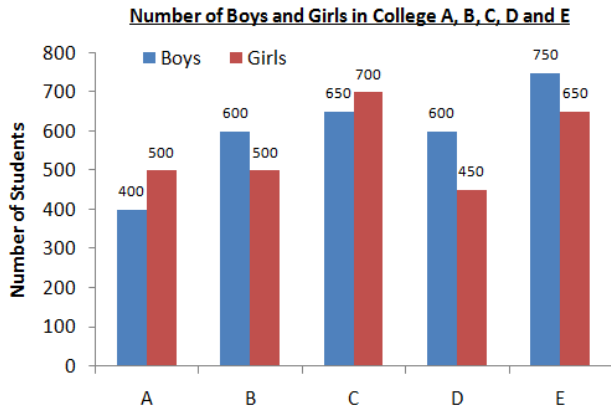
B  $20 \text{ cm}^2$

C  $30 \text{ cm}^2$

D  $24 \text{ cm}^2$

Answer: D

Question 117

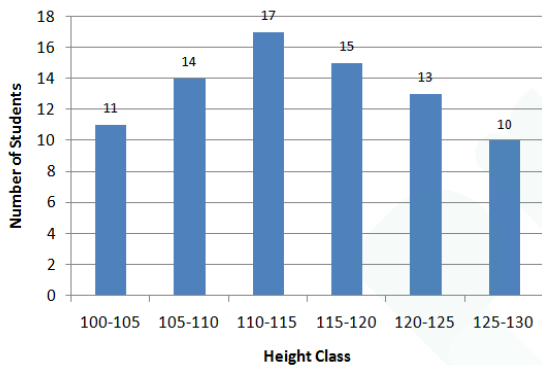


In the given bar graph, in which college the difference between the percentage of boys and girls is maximum, by taking total number of students as base for that college?

- A A
- B E
- C B
- D D

Answer: D

Question 118



In the given histogram, in which class does the median height of the students lie?

- A 105-110
- B 110-115
- C 115-120
- D 120-125

Answer: B

Question 119

Two numbers are in the ratio 4 : 5. If their HCF is 16. then the sum of these two numbers is:

- A 150
- B 160
- C 124

D 144

Answer: D

**Question 120**

$4\frac{4}{5} \div 7$  of  $7 + \frac{4}{5} \times 10 - \frac{1}{5}$  is equal to:

A  $\frac{34}{25}$

B  $\frac{41}{25}$

C  $\frac{8}{5}$

D  $\frac{7}{5}$

Answer: B

**Question 121**

What is the sum of digits of the least number. which when divided by 15, 18 and 24 leaves the remainder 8 in each case and is also divisible by 13?

A 18

B 16

C 15

D 17

Answer: D

**Question 122**

A shopkeeper marks his goods at a price such that after giving a discount of 25 % he gains 20% . If the cost price of the article is ₹ 460, what is its marked price?

A ₹ 736

B ₹ 725

C ₹ 748

D ₹ 752

Answer: A

**Question 123**

If  $(x - 5)^3 + (x - 6)^3 + (x - 7)^3 = 3(x - 5)(x - 6)(x - 7)$ , then what is the value of  $x$ ?

A 7

B 5

C 18

D 6

Answer: D

**Question 124**

A shopkeeper sold two articles for ₹ 9471 each. On one, he gained 23% and on the other, he lost 23%. What is the overall percentage gain or loss?

A 5.29% gain

B 5.29% loss

C 6.29% loss

D 6.29% gain

Answer: B

**Question 125**

In a class of 50 students. 40% are girls. The average weight of the boys is 62 kg and that of the girls is 58 kg. What is the average weight (in kg) of the whole class?

A 60.4

B 60.2

C 60.8

D 60.6

Answer: A

**Question 126**

The radius of a cylinder is increased by 150 cm and its height is decreased by 20 cm. What is the percentage increase in its volume?

A 80%

B 400%

C 500%

D 600%

Answer: B

**Question 127**

The value of  $\left[ \frac{\sin^2 24^\circ + \sin^2 66^\circ}{\cos^2 24^\circ + \cos^2 66^\circ} + \sin^2 61^\circ + \cos 61^\circ \sin 29^\circ \right]$  is equal to:

A 1

B 3

C 0

D 2

Answer: D

Question 128

If  $\tan x = \cot(45^\circ + 2x)$ , then what is the value of  $x$ ?

A  $45^\circ$

B  $20^\circ$

C  $15^\circ$

D  $\frac{45^\circ}{2}$

Answer: C

Question 129

A, B and C started a business by investing ₹ 55,000, ₹ 65,000 and ₹ 75,000 respectively. A is a working partner and gets 20% of the profit and the remaining is distributed in the proportion of their investments. If total profit is ₹ 87,750, what is the share of A?

A ₹ 23,000

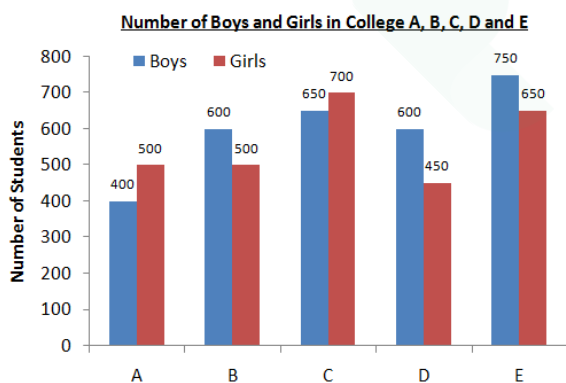
B ₹ 37,350

C ₹ 27,000

D ₹ 37,500

Answer: B

Question 130



In the given bar graph, what is the average number of girls in all colleges?

A 550

B 560

C 540

D 600

Answer: B



**Question 131**

In  $\triangle ABC$ ,  $\angle A = 50^\circ$ . In sides  $AB$  and  $AC$  are produced to the point  $D$  and  $E$ . If the bisectors of  $\angle CBD$  and  $\angle BCE$  meet at the point  $O$ , then  $\angle BOC$  is equal to:

- A  $55^\circ$
- B  $75^\circ$
- C  $65^\circ$
- D  $40^\circ$

Answer: C

**Question 132**

The successive discounts of 20%, 10 % and 15 % is equivalent to a single discount of:

- A 42.2 %
- B 43.5 %
- C 38.8 %
- D 44.5%

Answer: C

**Question 133**

What is the sum of the mean proportional between 10.8 and 4.8 and the third proportional of 2 and 4?

- A 10.2
- B 11.2
- C 8.2
- D 15.2

Answer: D

**Question 134**

The square root of which of the following is a rational number?

- A 6250.49
- B 1250.49
- C 5768.28
- D 1354.24

Answer: D

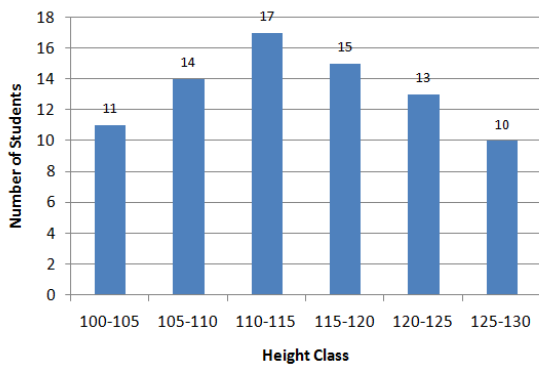
Question 135

If  $x + \frac{1}{x} = 5$ , then  $x^3 + \frac{1}{x^3}$  is equal to:

- A 125
- B 130
- C 145
- D 110

Answer: D

Question 136



In the given histogram, what percentage of students have height in the interval of 105 - 110?

- A 17%
- B 16.5%
- C 17.5%
- D 18%

Answer: C

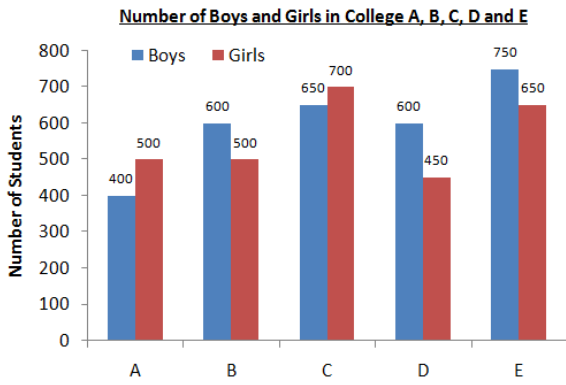
Question 137

The sides of a triangle are 10 cm, 24 cm and 26 cm. At each of its vertices, circles of radius 3.5 cm are drawn. What is the area of the triangle excluding the portion covered by the sectors of the circles? ( $\pi = \frac{22}{7}$ )

- A  $100.75 \text{ cm}^2$
- B  $81.5 \text{ cm}^2$
- C  $75.75 \text{ cm}^2$
- D  $78.25 \text{ cm}^2$

Answer: A

Question 138



In the given bar graph, what is the ratio of the total boys and girls in all 5 colleges?

- A 13 : 12
- B 14 : 15
- C 15 : 14
- D 12 : 13

Answer: C

Question 139

If  $a^3 - b^3 = 208$  and  $a - b = 4$ , then  $(a + b)^2 - ab$  is equal to:

- A 42
- B 52
- C 32
- D 38

Answer: B

Question 140

$675 \times 675 \times 675 + 325 \times 325 \times 325$   
 $67.5 \times 67.5 + 32.5 \times 32.5 - 67.5 \times 32.5$  is equal to:

- A 10,000
- B 100
- C 1,00,000
- D 1,000

Answer: C

Question 141

A ladder leaning against a wall makes an angle  $\alpha$  with the horizontal ground such that  $\tan \alpha = \frac{3}{4}$ . If the foot of the ladder is 5 m away from the wall, what is the length of the ladder?

- A 4.5m
- B 6.25 m
- C 5.25 m
- D 3.75 m

Answer: B

**Question 142**

$9\frac{3}{4} \div [2\frac{1}{6} + \{4\frac{1}{3} - (2\frac{1}{2} + \frac{3}{4})\}]$  is equal to:

- A 4
- B 3
- C  $\frac{15}{4}$
- D  $\frac{17}{4}$

Answer: B

**Question 143**

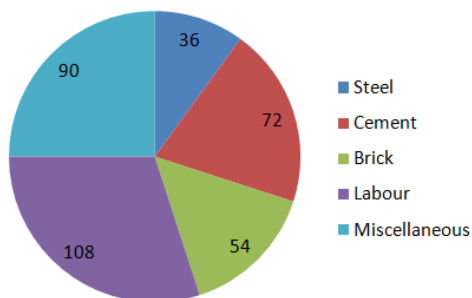
$ABCD$  is a cyclic quadrilateral such that  $AB$  is a diameter of the circle circumscribing it and angle  $ADC = 140^\circ$ . Then angle  $BAC$  is equal to:

- A  $60^\circ$
- B  $38^\circ$
- C  $50^\circ$
- D  $40^\circ$

Answer: C

**Question 144**

Degree of Cost incurred in different Expenditure (Total ₹ 4,50,000)



In the given pie-chart, what is the ratio of the total expenditure on steel, cement and bricks to the total expenditure on labour and miscellaneous expenses?

- A 4 : 5
- B 9 : 11

C 3 : 7

D 3 : 5

Answer: B

**Question 145**

24 persons working 8 hours a day can complete 2 units of a work in 10 days. How many persons are required to complete 4 units of that work, if they work 6 hours a day for 16 days?

A 40

B 36

C 48

D 32

Answer: A

**Question 146**

The average of 16 numbers is 43. The average of the first 7 numbers is 45 and the average of the next 6 numbers is 52. If the 14<sup>th</sup> number is 11 less than the 15<sup>th</sup> number and is 5 more than the 16<sup>th</sup> number, then the average of the 15<sup>th</sup> and 16<sup>th</sup> number is:

A 48.5

B 48

C 47.5

D 49

Answer: B

**Question 147**

Pipes A and B can fill a tank in 6 hours and 9 hours respectively and pipe C can empty the full tank in 12 hours. If all three pipes are opened together when a tank is empty, in how many hours will 35% of the tank be filled?

A 1.9

B 1.6

C 1.1

D 1.8

Answer: D

**Question 148**

A boat can go 30 km downstream and 24 km upstream in 2 hours 27 minutes. Also, it can go 20 km downstream and 8 km upstream in 74 minutes. What is the speed of the boat in still water in km/h ?

A 22

B 18

C 20

D 24

Answer: A

**Question 149**

The price of sugar has decreased by 15 %. By what percentage can a person increase the consumption so that there is no change in the expenditure?

A  $\frac{300}{23}$  %

B  $\frac{50}{3}$  %

C  $\frac{20}{3}$  %

D  $\frac{300}{17}$  %

Answer: D

**Question 150**

5 cubes, each of edge 4 cm, are joined end to end. What is the total surface area of the resulting cuboid?

A  $486 \text{ cm}^2$

B  $526 \text{ cm}^2$

C  $352 \text{ cm}^2$

D  $720 \text{ cm}^2$

Answer: C

## English

**Instructions**

For the following questions answer them individually

**Question 151**

Identify the segment in the sentence. which contains the grammatical error.

Why she was angry with her son?

A she was

B her son

C angry with

D Why

Answer: A

**Question 152**

Select the most appropriate option to substitute the underlined segment in the given sentence. If there is no need to substitute it, select No substitution required.

The cause of the disaster has not yet known but an enquiry has been set up to find out what happened.

- A No substitution required
- B have not yet been known
- C was not yet known
- D is not yet known

**Answer: D**

**Question 153**

Select the word, which means the same as the group of words given.

A fortress typically one on high ground above a city

- A colossus
- B palace
- C tower
- D citadel

**Answer: D**

**Question 154**

Select the most appropriate meaning of the underlined idiom in the given sentence. He has set up his business now as he knows the ins and outs of it.

- A details
- B importance
- C difficulties
- D usefulness

**Answer: A**

**Question 155**

Identify the segment in the sentence, which contains the grammatical error.

The old man climbed seven floors with hardly no effort at all.

- A at all
- B climbed
- C hardly no effort

D The old man

Answer: C

**Question 156**

Identify the segment in the sentence, which contains the grammatical error.  
In this novel I came across some words which meaning I do not know.

A which meaning

B In this novel

C do not know

D came across

Answer: A

**Question 157**

Select the antonym of the given word.

**VANITY**

A timidity

B humility

C dignity

D pride

Answer: B

**Question 158**

Select the most appropriate word to fill in the blank.  
You have travelled a long way. You ..... be tired.

A should

B can

C must

D could

Answer: C

**Question 159**

Select the synonym of the Given word.

**MASSIVE**

A strong

B thick

C solid



D huge

Answer: D

### Instructions

Read the following passage and answer the questions given after it.

Passage:

Tutankhamun was an Egyptian pharaoh who was buried in a lavish tomb filled with gold artifacts in the Valley of the Kings. His tomb was discovered in 1922 by an archaeological team led by British Egyptologist Howard Carter.

The tomb was mostly intact, an extraordinary find given that most of the tombs in the Valley of the Kings had been looted in ancient times. But while Tutankhamun's tomb was lavish, historical and archaeological evidence indicates that the young pharaoh was sickly and spent his short rule trying to undo a religious revolution that his father had started.

Tutankhaten (as he was called at birth) was born around the year 1341 B.C. His father was the pharaoh Akhenaten, a revolutionary pharaoh who tried to focus Egypt's polytheistic religion around the worship of the sun disc, the Aten. In his fervor, Akhenaten ordered the names and images of other Egyptian deities to be destroyed or defaced.

Tutankhamun ascended to the throne around 1332 B.C., when he was about 9 years old. Given his young age he would have relied heavily on his advisers. At some point his name was changed to Tutankhamun, removing the word "aten" — a reminder of his father's religious revolution — from his name.

Tutankhamun also condemned his father's actions in a stela (a stone with inscription) found at Karnak, saying that Akhenaten's religious revolution caused the gods to ignore Egypt. Part of the stela reads "the temples and the cities of the gods and the goddesses, starting from Elephantine as far as the Delta marshes ... were fallen into decay and their shrines were fallen into ruin, having become mere mounds overgrown with grass ... The gods were ignoring this land..."

Archaeological evidence indicates that Tutankhamun suffered from ill health. A study of his remains published in 2010 found that he suffered from a variety of maladies, including malaria and Kohler disease (a rare bone disorder of the foot). A number of canes have been found in Tutankhamun's tomb, finds that support the idea that the pharaoh had difficulty walking at times.

It's not known what killed Tutankhamun. There have been numerous hypotheses put forward over the years. It's been suggested that he died from an infection caused by a broken leg or from injuries suffered in a chariot accident.

The boy king died in 1323 B.C. around the age of 18. His death was unexpected, and his tomb appears to have been finished quickly. Microbes found on the wall of the tomb indicate that the paint on the wall wasn't even dry when the tomb was sealed.

Howard Carter's team discovered the tomb's entranceway on November 4, 1922, and on November 26 they got inside.

While the treasures were incredible, the tomb was unusually small for a pharaoh's burial, containing only 110 square meters (1,184 square feet) of floor space. The tomb's small size may have been because the pharaoh died young and unexpectedly and there wasn't time to carve out a larger tomb.

### Question 160

What is the main theme of the passage?

- A The tomb of Tutankhamun
- B The life and death of the boy Pharaoh
- C The death of Tutankhamun and his burial
- D The discovery of an incredible treasure

Answer: B

### Question 161

The discovery of a number of canes in the tomb indicates that Tutankhamun:

- A had difficulty in walking.

- B suffered from an infection.
- C had fallen from a chariot.
- D suffered from Malaria.

Answer: A

**Question 162**

**Tutankhainun's father was a revolutionary. What was his revolution?**

- A He wanted the Egyptians to worship one God Aten.
- B Egyptians were asked to have no religion and no god.
- C He wanted his people to be polytheistic.
- D Images and names of all the Egyptian deities had to be destroyed.

Answer: A

**Question 163**

**Tutankhainun had a short rule. Most of his time was used in:**

- A looking after the well-being of his people
- B erecting stelae at different places
- C trying to undo the religious revolution of his father
- D fighting with his own diseases

Answer: C

**Question 164**

**Which statement is NOT true according to the passage?**

- A Tutankhamun's tomb was lavishly filled with Gold artifacts.
- B Howard Carter's team discovered the tomb's entranceway on November 26, 1922.
- C The tomb was unusually small for a pharaoh's burial.
- D The tomb appears to have been finished quickly as the paint wasn't dry when it was sealed

Answer: B

**Instructions**

For the following questions answer them individually

**Question 165**

**Select the most appropriate word to fill in the blank.  
Our new office is equipped ..... all the latest technology.**

- A by

- B from
- C about
- D with

**Answer: D**

**Question 166**

Select the wrongly spelt word.

- A gobbel
- B gloomy
- C gloss
- D glutton

**Answer: A**

**Question 167**

Select the word, which means the same as the group of words given.  
the keeper of a museum

- A compere
- B curator
- C conservator
- D commissioner

**Answer: B**

**Question 168**

Select the antonym of the given word.  
LIVELY

- A bubbly
- B active
- C sharp
- D sluggish

**Answer: D**

**Question 169**

Select the most appropriate option to substitute the underlined segment in the given sentence. If there is no need to substitute it, select No substitution required.

Every year our association is having a meeting to elect the officers.

- A are having a meeting

- B No substitution required
- C having a meeting
- D has a meeting

**Answer: D**

**Question 170**

Select the antonym of the given word.

**ENTHUSIASM**

- A fervor
- B nervousness
- C zeal
- D apathy

**Answer: D**

**Question 171**

Select the wrongly spelt word.

- A victorious
- B precious
- C couragious
- D curious

**Answer: C**

**Question 172**

Select the word, which means the same as the group of words given.

**A large enclosure for keeping the birds in**

- A menagerie
- B aviary
- C aquarium
- D apiary

**Answer: B**

**Question 173**

Select the most appropriate word to fill in the blank.

The assistant in the library picked up the books from the tables and put ..... back on the shelves.

- A its
- B it
- C them
- D they

Answer: C

**Question 174**

Select the most appropriate option to substitute the underlined segment in the given sentence. If there is no need to substitute it, select **No substitution required**.

Everybody wants to be winning a prize in the arts competition.

- A want winning
- B No substitution required
- C wants to win
- D wants to have won

Answer: C

**Question 175**

Select the most appropriate option to substitute the underlined segment in the given sentence. If there is no need to substitute it, select **No substitution required**.

Thirteen miners were trapped inside a coal mine due to flooding from a nearby liver yesterday.

- A were trapped into a coal mine
- B trapped inside a coal mine
- C have been trapped inside a coal mine
- D No substitution required

Answer: D

**Question 176**

Select the most appropriate meaning of the underlined idiom in the given sentence. After getting the news of his promotion, he was in high spirits.

- A mad
- B joyful
- C drunk
- D hopeful

Answer: B

**Question 177**

Select the synonym of the given word.

**FOREGO**

- A forget
- B give up
- C go ahead
- D ban

**Answer: B**

**Question 178**

Select the wrongly spelt word.

- A discomfort
- B dissappoint
- C disallow
- D disappear

**Answer: B**

**Question 179**

Select the word, which means the same as the group of words given.  
a person who eats human flesh

- A scavenger
- B tribal
- C carnivore
- D cannibal

**Answer: D**

**Instructions**

In the following passage, some words have been deleted. Fill in the blanks with the help of the alternatives given. Select the most appropriate option for each number.

Passage:

What does the word scout mean? During a war a soldier is chosen to go .....(1) of an army in order to .....(2) out where the enemy is. He then .....(3) back to the commander all the .....(4) he has gathered about the ..... (5). Such a soldier is known as a scout.

**Question 180**

Select the most appropriate option to fill in blank No.1

- A after
- B before

C behind

D ahead

**Answer: D**

**Question 181**

Select the most appropriate option to fill in blank No.2

A call

B find

C bring

D carry

**Answer: B**

**Question 182**

Select the most appropriate option to fill in blank No.3

A reports

B carries

C sends

D tells

**Answer: A**

**Question 183**

Select the most appropriate option to fill in blank No.4

A news

B messages

C information

D communications

**Answer: C**

**Question 184**

Select the most appropriate option to fill in blank No.5

A enemy

B soldiers

C army

D commanders

Answer: A

**Instructions**

For the following questions answer them individually

**Question 185**

Identify the segment in the sentence. which contains the Grammatical error.  
I thanked him for his advices.

- A him
- B for his
- C I thanked
- D advices

Answer: D

**Question 186**

Select the synonym of the given word.  
HARASS

- A bother
- B help
- C refuse
- D care

Answer: A

**Question 187**

Select the most appropriate meaning of the underlined idiom in the given sentence. Many people in our country like to feather their own nest from the money they raise for social work.

- A enrich oneself by dishonest means
- B provide comforts in one's house
- C achieve something and be proud of it
- D make one's family comfortable

Answer: A

**Question 188**

Select the antonym of the given word.  
HOLLOW

- A vacant



- B shallow
- C solid
- D narrow

Answer: C

#### Question 189

Select the word, which means the same as the group of words given.  
a medical specialist who administers drugs for relieving pain during surgery

- A dermatologist
- B anesthetist
- C nephrologist
- D analgesic

Answer: B

#### Question 190

Select the most appropriate option to substitute the underlined segment in the given sentence. If there is no need to substitute it, select No substitution required.

This is the first time anybody have explored into this part of the country.

- A anybody has explored this part
- B anybody have explored this part
- C No substitution required
- D anybody has explored into this part

Answer: A

#### Question 191

Select the wrongly spelt word.

- A esteem
- B estimate
- C establish
- D essencal

Answer: D

#### Question 192

Select the most appropriate meaning of the underlined idiom in the given sentence.

A friend is no friend if he leaves you in the lurch.

- A take advantage of someone

- B leave for one's own work
- C make a fool of someone
- D leave someone in a helpless condition

**Answer: D**

**Question 193**

**Identify the segment in the sentence. which contains the Grammatical error.  
To my point of view he should not have behaved in such a manner.**

- A To my point of view
- B behaved
- C in such a manner
- D should not have

**Answer: A**

**Question 194**

**Select the synonym of the given word.  
AMPLIFY**

- A electrify
- B supply
- C magnify
- D satisfy

**Answer: C**

**Question 195**

**Select the synonym of the given word.  
REPLETE**

- A restful
- B calm
- C occupied
- D full

**Answer: D**

**Question 196**

**Select the wrongly spelt word.**

- A blister
- B blind

C blossom

D blemish

Answer: C

#### Question 197

Select the most appropriate word to fill in the blank.

You will not be allowed in the Film Festival ..... you have a photo ID card.

A unless

B whether

C in case

D if

Answer: A

#### Question 198

Select the most appropriate word to fill in the blank.

I looked at my damaged car and ..... how much it would cost to repair it.

A wonders

B wondered

C wonder

D wondering

Answer: B

#### Question 199

Select the most appropriate meaning of the underlined idiom in the given sentence. Don't take it seriously. He was simply pulling you leg.

A scolding someone for nothing.

B playing a joke with someone

C speaking in a harsh tone

D trying to comfort someone

Answer: B

#### Question 200

Select the antonym of the given word.

ADVERSITY

A casualty



# Latest Sarkari jobs, Govt Exam alerts, Results and Vacancies

- ▶ Latest News and Notification
- ▶ Exam Paper Analysis
- ▶ Topic-wise weightage
- ▶ Previous Year Papers with Answer Key
- ▶ Preparation Strategy & Subject-wise Books

To know more [Click Here](#)



[www.prepp.in](http://www.prepp.in)