




















Practice, Learn and Achieve
Your Goal with Prepp

NVS Exam

PGT Economics Paper (2019)

Simplifying
Government Exams

 SSC CHSL	 IAS EXAM	 RRB NTPC	 NTSE	 CDS
 SSC CGL	 CBSE UGC NET	 IBPS PO	 NDA	
 SBI PO	 IBPS CLERK	 AFCAT	 SSC JE	 CTET
 CSIR UGC NET	 CAPF	 IBPS RRB		

www.prepp.in



Navodaya Vidyalaya Samiti

(An Autonomous Body Under MHRD) Government of India

Roll No.	
Participant Name	
Test Center Name	
Test Date	
Test Time	
Subject	PGT ECONOMICS

Section : General (English & Hindi)

Q.1 Select the correct passive form of the given sentence:

The scientists have confirmed the existence of 44 new planets in other solar systems.

Ans 1.

The existence of 44 new planets in other solar systems has been confirmed by scientists.

2.

The existence of 44 new planets in other solar systems confirmed scientists.

3.

The existence of 44 new scientists in other solar systems has been confirmed by the planets.

4.

The existence of 44 new planets in other solar systems will be confirmed by scientists.

Question ID : 5096476111

Status : Answered

Chosen Option : 1

Q.2 Select the most appropriate option to fill in the blank:

There is nothing wrong with the television set _____ but there is definitely some problem in the dish.

Ans 1. itself

2. himself

3. themselves

4. oneself

Question ID : 5096476108

Status : Answered

Chosen Option : 1

Q.3 In the following sentence four words or phrases have been underlined. One of them is incorrect. Choose the INCORRECT word or phrase from the given options:

Forty-eight special trains was run over the past two days from Kerala to Chennai and other areas to rescue the people stranded in Kerala floods.

Ans 1. was run

- 2. over the past two days
- 3. stranded in Kerala floods
- 4. to rescue

Question ID : 5096476120
Status : Answered
Chosen Option : 1

Q.4 Select the most appropriate ANTONYM of the given word:

EXUDE

- Ans
- 1. Absorb
 - 2. Give
 - 3. Convey
 - 4. Emanate

Question ID : 5096476115
Status : Answered
Chosen Option : 4

Q.5 Select the most appropriate option to fill in the blank:

Please put off the television. Can't you see, Dadaji _____ on his book.

- Ans
- 1. has worked
 - 2. is working
 - 3. works
 - 4. worked

Question ID : 5096476103
Status : Answered
Chosen Option : 2

Q.6 Select the most appropriate option to fill in the blank:

This hotel is _____ than the other hotels on this road.

- Ans
- 1. cheap
 - 2. cheapest
 - 3. cheaper
 - 4. as cheap

Question ID : 5096476106
Status : Answered
Chosen Option : 3

Q.7 In the following sentence four words or phrases have been underlined. One of them is incorrect. Choose the INCORRECT word or phrase from the given options:

Grandmother often took me with her when she is going to the Sennaya Square for water.

- Ans
- 1. with her
 - 2. is going
 - 3. for water
 - 4. often

Question ID : 5096476119
Status : Answered
Chosen Option : 2

Q.8 Select the option that expresses the given sentence in direct speech.

Sapan told his mother not to worry. He would go to town and look for work. Then they would be able to pay their debt.

Sapan said,

- Ans
- 1. "Don't worry, mother. He will go to town and look for work. Then he will be able to pay their debt."
 - 2. "Mother, not to worry. He would go to town and look for work. Then they would be able to pay their debt."
 - 3. "Don't worry, mother. I would go to town and look for work. Then we would be able to pay our debt."
 - 4. "Don't worry, mother. I will go to town and look for work. Then we will be able to pay our debt."

Question ID : 5096476122
Status : Answered
Chosen Option : 4

Q.9 Select the option which is NOT an antonym of another word by way of adding the prefix 'dis-'.

- Ans
- 1. Disillusion
 - 2. Disappear
 - 3. Dispense
 - 4. Displease

Question ID : 5096476116
Status : Answered
Chosen Option : 3

Q.10 Select the most appropriate option to fill in the blank:

You _____ yourself if you too near to that machine.

- Ans
- 1. injure
 - 2. will injure
 - 3. have injured

4. injured

Question ID : 5096476104
Status : Answered
Chosen Option : 2

Q.11 Select the correctly spelt word:

- Ans
- 1. Cummission
 - 2. Comission
 - 3. Commision
 - 4. Commission

Question ID : 5096476117
Status : Answered
Chosen Option : 4

Q.12 Select the most appropriate synonym of the given word:

ABANDONED

- Ans
- 1. Dismissed
 - 2. Dispersed
 - 3. Discarded
 - 4. Disturbed

Question ID : 5096476114
Status : Answered
Chosen Option : 2

Q.13 Select the option that expresses the given sentence in reported speech.

Rahul said to me, "I will get the vegetables for you from the market."

Rahul told me that:

- Ans
- 1. He would get the vegetables for you from the market.
 - 2. I will get the vegetables for you from the market.
 - 3. He will get the vegetables for me from the market.
 - 4. He would get the vegetables for me from the market.

Question ID : 5096476121
Status : Answered
Chosen Option : 4

Q.14

Select the most appropriate synonym of the given word:

DISCRETIONARY

- Ans
- 1. Exceptional
 - 2. Necessary
 - 3. Fixed
 - 4. Optional

Question ID : 5096476113
Status : Answered
Chosen Option : 1

Q.15 Select the most appropriate option to fill in the blank:

I cannot interview these candidates _____ I know their academic background.

- Ans
- 1. because
 - 2. unless
 - 3. if
 - 4. so that

Question ID : 5096476109
Status : Answered
Chosen Option : 2

Q.16 Select the correct passive form of the given sentence:

The landowners sold the abandoned land to the Jewish Land Fund at an outrageous price.

- Ans
- 1. The abandoned land was sold by the landowners to the Jewish Land Fund at an outrageous price.
 - 2. The abandoned land had been sold by the landowners to the Jewish Land Fund at an outrageous price.
 - 3. The Jewish Land Fund was sold by the landowners to abandoned land at an outrageous price.
 - 4. The abandoned land sold the landowners to the Jewish Land Fund at an outrageous price.

Question ID : 5096476112
Status : Answered
Chosen Option : 1

Q.17 Select the most appropriate option to fill in the blank:

The _____ ship prove to be a treasure trove for the pirates.

- Ans
- 1. sunken
 - 2. sunk

3. drowning

4. drowned

Question ID : 5096476105
Status : Answered
Chosen Option : 3

Q.18 Select the INCORRECTLY spelt word:

Ans 1. Grandeur

2. Guardian

3. Garrantee

4. Gorgeous

Question ID : 5096476118
Status : Answered
Chosen Option : 3

Q.19 Select the most appropriate option to fill in the blank:

The Jews brought strange trees and Ibrahim made Farouk count _____.

Ans 1. him

2. us

3. them

4. they

Question ID : 5096476107
Status : Answered
Chosen Option : 3

Q.20 Select the most appropriate option to fill in the blank:

Her parent gave her a satellite phone _____ she needed to contact somebody in emergency while on her high altitude climb.

Ans 1. whereas

2. in case

3. so that

4. as though

Question ID : 5096476110
Status : Answered
Chosen Option : 2

Q.21 _____ (समय के अनुसार) चलोगे तभी सफल हो पाओगे। रिक्त स्थान भरिए:

Ans 1. आसमय

2. अनुसमय

3. प्रतिसमय

✓ 4. यथासमय

Question ID : 5096476138
Status : Answered
Chosen Option : 4

Q.22 'नफ़ा' का विलोम है:

- Ans
- ✗ 1. मुनाफ़ा
 - ✗ 2. फ़ायदा
 - ✓ 3. नुक़सान
 - ✗ 4. लाभ

Question ID : 5096476129
Status : Answered
Chosen Option : 3

Q.23 निम्नलिखित में से कौन सा वाक्य अशुद्ध है:

- Ans
- ✗ 1. लड़के ने अपना काम किया।
 - ✗ 2. वह हिंदी नहीं बोल सकी।
 - ✗ 3. मैं गीत सुना चुका हूँ।
 - ✓ 4. वह अपने घर गई हैं।

Question ID : 5096476134
Status : Answered
Chosen Option : 2

Q.24 नाक के लिए तत्सम शब्द होगा:

- Ans
- ✗ 1. नख
 - ✗ 2. नाग
 - ✗ 3. अंग
 - ✓ 4. नासिका

Question ID : 5096476124
Status : Answered
Chosen Option : 4

Q.25 मलिन का पर्याय है:

- Ans
- ✗ 1. कलत्र
 - ✗ 2. उत्पल
 - ✓ 3. दूषित
 - ✗ 4. कच

Question ID : 5096476128
Status : Answered
Chosen Option : 3

Q.26 स्त्रीलिंग शब्द है:

- Ans
- 1. धोबिन
 - 2. बाग
 - 3. चिड़ा
 - 4. लोटा

Question ID : 5096476142
Status : Answered
Chosen Option : 1

Q.27 सदैव बहुवचन में प्रयुक्त होने वाला शब्द है:

- Ans
- 1. धातु
 - 2. आँसू
 - 3. कवि
 - 4. चिड़िया

Question ID : 5096476140
Status : Answered
Chosen Option : 1

Q.28 'अच्छे बुरे का अंतर न करना' वाक्यांश के लिए उचित मुहावरा होगा:

- Ans
- 1. ऊंगली उठाना
 - 2. ऊंगली पर नचाना
 - 3. एक लाठी से हाँकना
 - 4. ईमान बेचना

Question ID : 5096476132
Status : Answered
Chosen Option : 3

Q.29 निम्नलिखित में से कौन सा तद्भव शब्द है:

- Ans
- 1. पिपासा
 - 2. बच्चा
 - 3. वानर
 - 4. लौह

Question ID : 5096476125

Status : Answered
Chosen Option : 3

Q.30 'मुट्टी गरम करना' मुहावरे का उचित अर्थ बताइए:

- Ans
- 1. चोट पहुँचाना
 - 2. हाथ हिलाना
 - 3. रिश्वत देना
 - 4. हाथ तापना

Question ID : 5096476131
Status : Answered
Chosen Option : 3

Q.31 रहिमन पानी राखिये, बिन पानी सब सून में अलंकार है:

- Ans
- 1. अनुप्रास अलंकार
 - 2. रूपक अलंकार
 - 3. श्लेष अलंकार
 - 4. मानवीकरण अलंकार

Question ID : 5096476137
Status : Answered
Chosen Option : 3

Q.32 'ऊपर से मित्रता,अंदर से कपट' के लिए लोकोक्ति होगी:

- Ans
- 1. जैसी करनी वैसी भरनी
 - 2. मुँह में राम बगल में छुरी:
 - 3. नौ नकद न तेरह उधार
 - 4. नेकी कर कुएँ में डाल

Question ID : 5096476133
Status : Answered
Chosen Option : 2

Q.33 नौका का पर्याय नहीं है:

- Ans
- 1. तरी
 - 2. नाव
 - 3. जलभेरी
 - 4. तरिणी

Question ID : 5096476127
Status : Answered
Chosen Option : 3

Q.34 वेद + अंत की संधि है:

- Ans
- 1. वेदांत
 - 2. वेधांत
 - 3. भेदांत
 - 4. बेदांत

Question ID : 5096476136
Status : Answered
Chosen Option : 1

Q.35 जगन्नाथ का सही संधि विच्छेद है:

- Ans
- 1. जगत् + नाथ
 - 2. जगन + अनाथ
 - 3. जग + नाथ
 - 4. जगत + नाथ

Question ID : 5096476135
Status : Answered
Chosen Option : 1

Q.36 यह कपड़ा गंदा है। वाक्य का बहुवचन है:

- Ans
- 1. ये कपड़े गंदे हैं।
 - 2. यह कपड़ा गंदे है।
 - 3. ये कपड़ा गंदा है।
 - 4. यह गंदा कपड़ा है।

Question ID : 5096476141
Status : Answered
Chosen Option : 1

Q.37 निम्नलिखित में से तत्सम शब्द कौन सा है:

- Ans
- 1. नया
 - 2. निद्रा
 - 3. पैर
 - 4. पत्थर

Question ID : 5096476123
Status : Answered

Chosen Option : 2

Q.38 'अस्थिर' का विलोम होगा:

- Ans
- 1. चलायमान
 - 2. अचल
 - 3. स्थिर
 - 4. मूक

Question ID : 5096476130
Status : Answered
Chosen Option : 3

Q.39 रामभक्त शब्द में समास है

- Ans
- 1. अव्ययीभाव
 - 2. बहुब्रीहि
 - 3. द्वन्द्व
 - 4. तत्पुरुष

Question ID : 5096476139
Status : Answered
Chosen Option : 4

Q.40 तद्भव शब्द बताइए:

- Ans
- 1. वधू
 - 2. विद्युत्
 - 3. भाप
 - 4. विवाह

Question ID : 5096476126
Status : Answered
Chosen Option : 3

Section : General Awareness

Q.1 एक पौधे के निम्नलिखित में से किस भाग में प्रकाश संश्लेषण की प्रक्रिया नहीं होती है?

- Ans
- 1. शाखाओं
 - 2. जड़
 - 3. पत्ते
 - 4. तना

Question ID : 5096476165
Status : Answered
Chosen Option : 2

Q.2 Which country is set to become the first country to make all public transport free from the year 2020?

- Ans
- 1. Luxembourg
 - 2. Croatia
 - 3. Finland
 - 4. Lithuania

Question ID : 5096476149
Status : Answered
Chosen Option : 1

Q.3 Which state has been awarded as the best performer in start-up ranking 2018 by the Department of Industrial Policy and Promotion (DIPP)?

- Ans
- 1. Gujarat
 - 2. Haryana
 - 3. Andhra Pradesh
 - 4. Madhya Pradesh

Question ID : 5096476143
Status : Answered
Chosen Option : 1

Q.4 किस सम्राट ने भारतीय उपमहाद्वीप में गजपति साम्राज्य की स्थापना की?

- Ans
- 1. कखरुआ देव
 - 2. प्रतापरुद्र देव
 - 3. कपिलेंद्र देव
 - 4. पुरुषोत्तम देव

Question ID : 5096476154
Status : Answered
Chosen Option : 2

Q.5 भारत में निम्नलिखित में से किस भौगोलिक क्षेत्र की ऊंचाई सबसे कम है?

- Ans
- 1. मालेनद
 - 2. पालनाडु
 - 3. कोंगु नाडु
 - 4. कुड्डनाड

Question ID : 5096476169
Status : Answered
Chosen Option : 2

Q.6 वर्ष 1930 में भारत की स्वतंत्रता संग्राम के दौरान, चटगाँव शस्त्रागार पर आक्रमण करने वाले नेता कौन थे?

Ans

- ✓ 1. सूर्य सेन
- ✗ 2. रासबिहारी बोस
- ✗ 3. अंबिका चक्रवर्ती
- ✗ 4. बिनाय बसु

Question ID : 5096476156
Status : Answered
Chosen Option : 1

Q.7 Which of the following sportspersons has been given Rajiv Gandhi Khel Ratna Award 2018?

Ans

- ✗ 1. Vijender Singh
- ✗ 2. Saina Nehwal
- ✗ 3. Gagan Narang
- ✓ 4. Virat Kohli

Question ID : 5096476151
Status : Answered
Chosen Option : 4

Q.8 निम्नलिखित में से किस देश ने लॉरियस वर्ल्ड स्पोर्ट्स अवार्ड्स 2019 की मेजबानी की?

Ans

- ✗ 1. मोलदोवा
- ✓ 2. मोनाको
- ✗ 3. जॉर्जिया
- ✗ 4. आर्मेनिया

Question ID : 5096476147
Status : Answered
Chosen Option : 3

Q.9 राष्ट्रमंडल खेल (कॉमनवेल्थ गेम) 2018 में, किस भारतीय खिलाड़ी ने महिला एकल टेबल टेनिस खेल में स्वर्ण पदक जीता?

Ans

- ✓ 1. मनिका बत्रा
- ✗ 2. मधुरिका पाटकर
- ✗ 3. पूजा सहस्रबुद्धे
- ✗ 4. सुतीर्थ मुखर्जी

Question ID : 5096476152
Status : Answered
Chosen Option : 2

Q.10 दुनिया के पहले थर्मल बैटरी संयंत्र का अनावरण निम्नलिखित में से किस राज्य में हुआ था?

Ans

- 1. उत्तर प्रदेश
- 2. गोवा
- 3. महाराष्ट्र
- 4. आंध्र प्रदेश

Question ID : 5096476163
Status : Answered
Chosen Option : 3

Q.11 How many Mahajanapadas or 'Great Kingdoms' existed in the ancient India during the lifetime of Lord Gautama Buddha?

- Ans
- 1. Ten
 - 2. Twelve
 - 3. Sixteen
 - 4. Fourteen

Question ID : 5096476157
Status : Answered
Chosen Option : 3

Q.12 Which state had organised the cultural festival 'Rashtriya Balrang 2018' in collaboration with the Indira Gandhi Rashtriya Manav Sangrahalaya in December 2018?

- Ans
- 1. Bihar
 - 2. Gujarat
 - 3. Madhya Pradesh
 - 4. Rajasthan

Question ID : 5096476145
Status : Answered
Chosen Option : 4

Q.13 What is the educational qualification prescribed by the Indian Constitution for becoming a member of the Lok Sabha?

- Ans
- 1. Graduate
 - 2. No educational qualification has been prescribed
 - 3. XII
 - 4. X

Question ID : 5096476158
Status : Answered
Chosen Option : 2

Q.14 The National Youth Day is observed on January 12 every year to commemorate the birthday of which of the following leaders?

- Ans
- 1. APJ Kalam
 - 2. Rajiv Gandhi
 - 3. Subhash Chandra Bose

✓ 4. Swami Vivekanand

Question ID : 5096476172
Status : Answered
Chosen Option : 4

Q.15 Which country's earth observation satellite Mohammed VI-B was launched in November 2018 from French Guiana by the European launch company Arianespace?

- Ans
- ✗ 1. Nigeria
 - ✗ 2. Algeria
 - ✗ 3. Gambia
 - ✓ 4. Morocco

Question ID : 5096476148
Status : Answered
Chosen Option : 4

Q.16 Which among the following banks has launched Multi Option Payment Acceptance Device (MOPAD) for digital payments convenience?

- Ans
- ✗ 1. Canara Bank
 - ✗ 2. HDFC Bank
 - ✓ 3. SBI
 - ✗ 4. ICICI Bank

Question ID : 5096476162
Status : Answered
Chosen Option : 4

Q.17 सोनापानी मिनी-हाइडल पावर प्रोजेक्ट नामक हेरिटेज पावर प्रोजेक्ट, भारत के किस राज्य में स्थित है?

- Ans
- ✓ 1. मेघालय
 - ✗ 2. मिज़ोरम
 - ✗ 3. उत्तरांचल
 - ✗ 4. हिमाचल प्रदेश

Question ID : 5096476168
Status : Answered
Chosen Option : 1

Q.18 In which country has Africa's first high-speed rail line been unveiled?

- Ans
- ✗ 1. Mali
 - ✓ 2. Morocco
 - ✗ 3. Angola
 - ✗ 4. Ghana

Question ID : 5096476146
Status : Answered
Chosen Option : 2

Q.19 भारतीय संविधान का निम्नलिखित में से कौन सा अनुच्छेद, राज्यपाल द्वारा विशेष संबोधन से संबन्धित है?

- Ans
- 1. अनुच्छेद 176
 - 2. अनुच्छेद 228
 - 3. अनुच्छेद 214
 - 4. अनुच्छेद 150

Question ID : 5096476161
Status : Answered
Chosen Option : 2

Q.20 Where is the famous Indian Museum located?

- Ans
- 1. Chennai
 - 2. Delhi
 - 3. Mumbai
 - 4. Kolkata

Question ID : 5096476171
Status : Answered
Chosen Option : 3

Q.21 In which year was Pradhan Mantri Gram Sadak Yojana launched?

- Ans
- 1. 1991
 - 2. 2004
 - 3. 2000
 - 4. 2010

Question ID : 5096476164
Status : Answered
Chosen Option : 3

Q.22 $\text{HCl} + \text{NaOH}$ gives _____ + H_2O .

- Ans
- 1. NaCl
 - 2. ClOH
 - 3. NaOH
 - 4. HCl

Question ID : 5096476166
Status : Answered
Chosen Option : 1

Q.23 _____ was the Speaker of _____.

- Ans
- 1. P.A. Sangma; the first Lok Sabha

- 2. Ganesh Vasudev Mavalankar; the first Lok Sabha
- 3. P.A. Sangma; the fifth Lok Sabha
- 4. Ganesh Vasudev Mavalankar; the fifth Lok Sabha

Question ID : 5096476160
Status : Answered
Chosen Option : 1

Q.24 What is the total number of medals won by India in the Asian Games 2018?

- Ans
- 1. 69
 - 2. 79
 - 3. 59
 - 4. 49

Question ID : 5096476150
Status : Answered
Chosen Option : 1

Q.25 Who has authored the book 'A Rural Manifesto - Realizing India's Future through her Villages'?

- Ans
- 1. Arun Shourie
 - 2. Prashant Bhushan
 - 3. Varun Gandhi
 - 4. Brinda Karat

Question ID : 5096476144
Status : Answered
Chosen Option : 4

Q.26 Which British Governor General had introduced the railways in India?

- Ans
- 1. Henry Hardinge
 - 2. Lord Dalhousie
 - 3. Lord William Bentinck
 - 4. Charles Metcalfe

Question ID : 5096476155
Status : Answered
Chosen Option : 4

Q.27 36 km per hour is equal to:

- Ans
- 1. 1 metre per second
 - 2. 20 metre per second
 - 3. 10 metre per second
 - 4. 5 metre per second

Question ID : 5096476167

Status : Answered
Chosen Option : 3

Q.28 India lies to the _____.

- Ans
- 1. West of the Arabian Sea
 - 2. South of the Equator
 - 3. North of the Equator
 - 4. South of the Tropic of Capricorn

Question ID : 5096476170
Status : Answered
Chosen Option : 3

Q.29 यूनानियों द्वारा निम्नलिखित में से किस भारतीय राजा को 'अमित्रोचेदस' अर्थात् दुश्मनों का संहार करने वाला राजा कहा जाता था?

- Ans
- 1. चंद्रगुप्त मौर्य
 - 2. दशरथ
 - 3. बिन्दुसार
 - 4. अशोक

Question ID : 5096476153
Status : Answered
Chosen Option : 3

Q.30 Which of the following articles of the Constitution of India deals with money bills?

- Ans
- 1. Article 199
 - 2. Article 216
 - 3. Article 144
 - 4. Article 234

Question ID : 5096476159
Status : Answered
Chosen Option : 1

Section : General Aptitude

Q.1 दो बर्तनों A और B में अम्ल और जल का अनुपात क्रमशः 3 : 8 और 8 : 5 है। उनकी सामग्री को 11 : 13 के अनुपात में मिलाया जाता है। इस मिश्रण के 720 ml घोल में अम्ल और जल का अनुपात 2 : 3 बनाने के लिए इसमें कुल कितनी मात्रा में जल मिलाना होगा?

- Ans
- 1. 125 ml
 - 2. 105 ml
 - 3. 115 ml
 - 4. 95 ml

Question ID : 5096476200

Status : **Answered**
Chosen Option : **3**

Q.2 Select the option that is related to the third number in the same way as the second number is related to the first number.

48 : 12 :: 84 : ?

- Ans**
- 1. 21
 - 2. 24
 - 3. 18
 - 4. 20

Question ID : **5096476174**
Status : **Answered**
Chosen Option : **1**

Q.3 एक व्यक्ति अपने सामान का विक्रय मूल्य, क्रय मूल्य से 60% अधिक कीमत पर चिह्नित करता है। वह अपने सामान का 40% हिस्सा 10% की छूट पर, सामान का 35% हिस्सा 20% की छूट पर और बाकी हिस्सा 30% की छूट पर बेचता है। उसे कुल कितने प्रतिशत लाभ प्राप्त हुआ है?

- Ans**
- 1. 31.8 %
 - 2. 32.5 %
 - 3. 30.4 %
 - 4. 31.2 %

Question ID : **5096476199**
Status : **Answered**
Chosen Option : **3**

Q.4 If $a : 2b = 2 : 5$, $b : c = 3 : 2$, then $a : b : c$ is equal to:

- Ans**
- 1. 6 : 15 : 10
 - 2. 15 : 12 : 10
 - 3. 12 : 15 : 10
 - 4. 6 : 10 : 15

Question ID : **5096476196**
Status : **Answered**
Chosen Option : **3**

Q.5 MATTER : AFFAIR :: BASIC : ?

- Ans**
- 1. LOWER
 - 2. POINT
 - 3. TWIN
 - 4. CHIEF

Question ID : **5096476180**
Status : **Answered**
Chosen Option : **4**

Q.6 A person covers 20 km with a speed of 12 km/h and next 35 km with a speed of 20 km/h. What is his average speed for the whole journey in km/h (correct to one decimal place)?

- Ans
- 1. 17.6
 - 2. 16.4
 - 3. 16.1
 - 4. 17.2

Question ID : 5096476201
Status : Answered
Chosen Option : 3

Q.7 The value of $0.\overline{6} + 0.5\overline{23} - 0.2\overline{9}$ is equal to:

- Ans
- 1. $0.\overline{868}$
 - 2. $0.\overline{889}$
 - 3. $0.\overline{869}$
 - 4. $0.\overline{889}$

Question ID : 5096476192
Status : Answered
Chosen Option : 4

Q.8 Choose the correct alternative which will complete the following number series.

344, 278, 223, 179, 146, _____, 113

- Ans
- 1. 126
 - 2. 130
 - 3. 124
 - 4. 128

Question ID : 5096476173
Status : Answered
Chosen Option : 3

Q.9 Rohan and Lalit are good at Volleyball and Badminton. Rohan and Sameer are good at Tennis and Volleyball. Gopal and Lalit are good at Baseball and Badminton. Sameer, Gopal and Mukesh are good at Basketball and Tennis. Who is good at Tennis, Basketball, Badminton and Baseball?

- Ans
- 1. Gopal
 - 2. Lalit
 - 3. Sameer
 - 4. Rohan

Question ID : 5096476176
Status : Answered
Chosen Option : 1

Q.10 14400 के गुणजों की कुल संख्या कितनी है?

- Ans
- 1. 24

2. 48

3. 36

4. 63

Question ID : 5096476193

Status : Answered

Chosen Option : 1

Q.11 Four classmates, A, B, C and D, are sitting in a row facing towards the north. A and D are sitting at the two extreme ends. B is sitting between A and C. B is sitting second to the left of D. Who is sitting immediately to the right of B?

Ans 1. D

2. C

3. A

4. B

Question ID : 5096476183

Status : Answered

Chosen Option : 2

Q.12 If $\sqrt{43 - 24\sqrt{3}} = a + b\sqrt{3}$, then $(3a + 5b)$ is equal to:

Ans 1. -8

2. 12

3. 3

4. -11

Question ID : 5096476191

Status : Answered

Chosen Option : 3

Q.13 The unit's digit in the result of $(27)^{56} + (22)^{38} - (13)^{50}$ is :

Ans 1. 4

2. 7

3. 6

4. 5

Question ID : 5096476190

Status : Answered

Chosen Option : 3

Q.14 निम्नलिखित में से विषम का चयन करें।

Ans 1. FLOW

2. FLOOR

3. FLING

4. FLED

Question ID : 5096476186

Status : **Answered**
Chosen Option : 2

Q.15 The population of a town increases by 6% in the first year, by 8 % in the second year and by 5% in the third year. What is the percentage increase in the population at the end of 3 years?

- Ans
- 1. 19.234%
 - 2. 19%
 - 3. 20.324%
 - 4. 20.204%

Question ID : **5096476197**
Status : **Answered**
Chosen Option : 4

Q.16 In a code language, TABLE is written as WDEOH. How will CHAIR be written as in that language?

- Ans
- 1. KFDLU
 - 2. FKDLU
 - 3. LUKFD
 - 4. DLUKF

Question ID : **5096476179**
Status : **Answered**
Chosen Option : 2

Q.17 The “Rickets” is related to “Vitamin D”, “Anemia” is related to:

- Ans
- 1. Vitamin K
 - 2. Hemoglobin
 - 3. Iron
 - 4. Blood

Question ID : **5096476178**
Status : **Answered**
Chosen Option : 1

Q.18 Select the word that does NOT belong in the following series.

Pen, Paper, Book, Wisdom

- Ans
- 1. Paper
 - 2. Wisdom
 - 3. Book
 - 4. Pen

Question ID : **5096476187**
Status : **Answered**
Chosen Option : 2

Q.19

Rajat broke his leg while playing football on a Tuesday. The doctor put a plaster and asked him to come after 46 days to open it. On which day will he be going to open his plaster?

- Ans
- 1. Saturday
 - 2. Friday
 - 3. Sunday
 - 4. Monday

Question ID : 5096476182
Status : Answered
Chosen Option : 2

Q.20 Select the option that will replace the question mark (?) in the following series.

400, 625, ?, 1225, 1600

- Ans
- 1. 925
 - 2. 850
 - 3. 1000
 - 4. 900

Question ID : 5096476177
Status : Answered
Chosen Option : 4

Q.21 Arrange the following words in a meaningful order.

Desire	Interest	Attention	Action
4	1	3	2

- Ans
- 1. 4, 2, 1, 3
 - 2. 3, 2, 1, 4
 - 3. 3, 1, 4, 2
 - 4. 1, 3, 4, 2

Question ID : 5096476175
Status : Answered
Chosen Option : 3

Q.22 With which digit should letter 'x' in the number 835x4 be substituted so that the number becomes divisible by 12?

- Ans
- 1. 1
 - 2. 7
 - 3. 8
 - 4. 4

Question ID : 5096476195
Status : Answered
Chosen Option : 4

Q.23 The average of 17 numbers is 60. The average of the first 9 numbers is 55 and that of the last 9 numbers is 62. If 9th number is excluded, what is the average of the remaining numbers (correct to one decimal place)?

- Ans
- 1. 61.7
 - 2. 61.9
 - 3. 62.4
 - 4. 62.2

Question ID : 5096476198
Status : Answered
Chosen Option : 2

Q.24 What will be the value of the following expression if '+' means 'addition', '-' means 'subtraction', '×' means 'multiplication' and '÷' means 'division'?

$$88 \times 2 - 1 + 7 + 5$$

- Ans
- 1. 49
 - 2. 55
 - 3. 46
 - 4. 52

Question ID : 5096476181
Status : Answered
Chosen Option : 3

Q.25 A and B are brothers. B is the son of R, but R is not the father of B. If P is R's sister's child, then how is A related to P?

- Ans
- 1. Brother
 - 2. Sister
 - 3. Uncle
 - 4. Cousin

Question ID : 5096476184
Status : Answered
Chosen Option : 4

Q.26 The sum of the first 20 terms of $\frac{1}{5 \times 10} + \frac{1}{10 \times 15} + \frac{1}{15 \times 20} + \frac{1}{20 \times 25} + \dots$ is:

- Ans
- 1. $\frac{19}{500}$
 - 2. $\frac{19}{100}$
 - 3. $\frac{4}{125}$
 - 4. $\frac{4}{105}$

Question ID : 5096476189
Status : Answered
Chosen Option : 3

Q.27 The HCF of two numbers is 12 and their product is 4320. How many such pairs of numbers are possible?

- Ans 1. 4
 2. 3
 3. 1
 4. 2

Question ID : 5096476194
Status : Answered
Chosen Option : 3

Q.28 The efficiency of A is 25% less than the efficiency of B. If working together, they can complete certain work in 12 days, in how many days A alone will complete that work?

- Ans 1. 26
 2. 24
 3. 21
 4. 28

Question ID : 5096476202
Status : Answered
Chosen Option : 4

Q.29 What is the sum of the digits of a number that is closest to 58692 and is a perfect square?

- Ans 1. 25
 2. 28
 3. 26
 4. 24

Question ID : 5096476188
Status : Answered
Chosen Option : 2

Q.30 Ram is standing at point A facing towards the north. He walks 30 m to his right, then turns to his left and walks 10 m. From there, he takes a left turn again and walks 15 m. In which direction is he now with respect to point A?

- Ans 1. East
 2. North-west
 3. North
 4. North-east

Question ID : 5096476185
Status : Answered
Chosen Option : 4

Section : Teaching Aptitude

Q.1 प्राथमिक स्तर पर सामाजिक विज्ञान पढ़ाने का निम्न में से क्या उद्देश्य होना चाहिए?

- Ans 1.
बच्चों में संवैधानिक दायित्वों की पूर्ति में राज्य की भूमिकाओं और जिम्मेदारियों की समझ विकसित करना।
 2.

बच्चों को सामाजिक व आर्थिक मुद्दों तथा चुनौतियों जैसे कि गरीबी, बाल श्रम, अभावग्रस्तता, अशिक्षा और असमानता के विभिन्न अन्य आयामों की गंभीरता के साथ जांच करने में सक्षम बनाना।

✓ 3.

बच्चों को सामाजिक मुद्दों के प्रति संवेदनशील बनाना और उनमें विभेदों व विविधता के प्रति सम्मान की भावना विकसित करना

✗ 4.

बच्चों में लोकतांत्रिक और धर्मनिरपेक्ष समाज में नागरिकों के अधिकारों और दायित्वों की समझ विकसित करना

Question ID : 5096476216

Status : Answered

Chosen Option : 3

Q.2 निम्न में से कौन सा कारक भावनात्मक रूप से प्रभावित नहीं करता है?

Ans ✗ 1. थकान

✗ 2. खराब स्वास्थ्य

✓ 3. विकासमूलक प्रभाव

✗ 4. दिन का समय

Question ID : 5096476205

Status : Answered

Chosen Option : 4

Q.3 निम्नलिखित आकृति को देखें और गेस्टाल्ट द्वारा प्रस्तावित वैचारिक संगठन के सिद्धांत की पहचान करें?



Ans ✗ 1. समानता का नियम

✗ 2. सामान्य भाग्य का नियम

✓ 3. क्लोज़र का नियम

✗ 4. निरंतरता का नियम

Question ID : 5096476210

Status : Answered

Chosen Option : 3

Q.4 The same number of boys and girls receiving educational services at different levels and in diverse forms is an example of:

Ans ✗ 1. gender awareness

✗ 2. gender equity

✓ 3. gender parity

✗ 4. gender sensitivity

Question ID : 5096476215

Status : Answered

Chosen Option : 2

Q.5 अरुणा "den" को "ben" तथा "was" को "saw" पढ़ती है। उसे शब्दों के उच्चारण में समस्या है। वह शॉर्ट-टर्म मेमरी डिफीसिएंसी से पीड़ित है। अरुणा की अध्ययन अक्षमताओं को किस रूप में वर्गीकृत किया जा सकता है?

- Ans
- 1. डिस्लेक्सिया
 - 2. प्रवाहगत विकार
 - 3. डिस्ग्रैफिया
 - 4. वाणी विकार

Question ID : 5096476221
Status : Answered
Chosen Option : 1

Q.6 कला शिक्षक को विद्यार्थी की कलाकृति के मूल्यांकन के लिए निम्न में से किस सूचकांक का उपयोग नहीं करना चाहिए?

- Ans
- 1. रचनात्मकता
 - 2. कला संबंधी गतिविधि करते समय साथियों के साथ संबंध
 - 3. कौशलों का विकास
 - 4. अभिव्यक्ति

Question ID : 5096476219
Status : Answered
Chosen Option : 3

Q.7 शेरन एक 6 साल का लड़का है, जो आंखों के संपर्क से बचता है, उसके पास एक विशिष्ट मजबूरी है कि वह शब्दों को दोहराए और वाणीरहित ध्वनि के प्रति अतिसंवेदनशील रहे। उसके किस चीज़ से ग्रसित होने की संभावना है?

- Ans
- 1. प्रमस्तिष्क पक्षाघात
 - 2. ध्यान देने की समस्या
 - 3. स्वलीनता
 - 4. डाउन सिंड्रोम

Question ID : 5096476220
Status : Answered
Chosen Option : 4

Q.8 The best way to inculcate learning on the uniqueness and diversity of a culture of a place is through:

- Ans
- 1. making the children do the models relating to culture
 - 2. asking the children to watch the news channels for updated information on culture
 - 3. showing pictures from newspapers that depict culture
 - 4. field trips to local regional and art centres to understand culture

Question ID : 5096476217
Status : Answered

Q.9 किसी भाषा का उपसमूह जो एकल शब्दों, वाक्यांशों और वाक्यों के अर्थ और उचित उपयोग को समझने से संबंधित है, उसे _____ रूप में जाना जाता है।

- Ans
- 1. स्वर विज्ञान
 - 2. शब्द संरचना
 - 3. शब्दार्थ विज्ञान
 - 4. वाक्य-विन्यास

Question ID : 5096476211

Status : Answered

Chosen Option : 4

Q.10 चार वर्ष आयु वाला रोहित बार-बार उस आइस्क्रीम की मांग कर रहा है जिसका वादा उसे आने वाले कल के लिए किया गया है। वह नियमित अंतराल पर पूछता है कि क्या कल आ गया। रोहित में निम्न में से क्या विकसित नहीं हुआ है?

- Ans
- 1. कल्पनाशीलता
 - 2. स्मृति
 - 3. समय की अवधारणा
 - 4. सामाजिक अवधारणा

Question ID : 5096476204

Status : Answered

Chosen Option : 3

Q.11 गणित के अध्यापन में विश्लेषणात्मक पद्धति के उपयोग का क्या परिणाम होता है?

- Ans
- 1. रटने को प्रोत्साहित करता है
 - 2. स्मृति कार्य को प्रेरित करता है
 - 3. अज्ञात तथ्यों से ज्ञात तथ्यों की ओर ले जाता है
 - 4. शिक्षार्थी धैर्यवान श्रोता बन जाता है

Question ID : 5096476213

Status : Answered

Chosen Option : 2

Q.12 रवि ने 4 माह की आयु में सहारे से बैठना शुरू कर दिया था और 10 माह की आयु में खड़ा होना शुरू कर दिया था। विकास के ये अनुक्रम _____ कहलाते हैं।

- Ans
- 1. अध्ययन चरण
 - 2. वृद्धि के चरण
 - 3. चरणबद्ध विकास
 - 4. विकास की महत्वपूर्ण घटनाये (मायिल स्टोन)

Question ID : 5096476203

Q.13 समग्र शिक्षा का निम्न में से क्या उद्देश्य नहीं है?

Ans 1.

बच्चों के लिए निःशुल्क और अनिवार्य शिक्षा का अधिकार (RTE) अधिनियम, 2009 के अंतर्गत उनके अधिकार के कार्यान्वयन में राज्यों का सहयोग करना

2.

स्कूली शिक्षा के सभी स्तरों पर समता और समावेश सुनिश्चित करना

3.

गुणवत्तापूर्ण शिक्षा प्रदान करना और अध्ययन के उद्देश्यों में बढ़ोत्तरी करना

4. छात्रों के मध्य आर्थिक अंतराल में कमी करना

Question ID : 5096476207

Status : Answered

Chosen Option : 4

Q.14 प्रयोगात्मक शोध के संदर्भ में निम्न में से कौन सा तथ्य सत्य है?

Ans 1.

यह समस्याओं के समाधान की प्रतीक्षा नहीं करता है। यह समयांतराल को समायोजित कर लेता है।

2. इसमें अधिक तैयारी की ज़रूरत नहीं होती है।

3. यह प्रयत्न-त्रुटि विधि अपनाती है।

4.

यह शोध की विधि नहीं है, बल्कि यह अन्य विधियों को कार्यान्वित करती है, जैसे कि ऐतिहासिक विधि, सर्वेक्षण विधि इत्यादि।

Question ID : 5096476218

Status : Answered

Chosen Option : 3

Q.15 निम्नलिखित में से सामाजिक विज्ञानों को पढ़ाने की वह कौन सी रणनीति है, जो शिक्षा के विभिन्न चरणों के माध्यम से विषय की निरंतर अखंड शिक्षा को बढ़ावा देती है?

Ans

1. कालानुक्रमिक दृष्टिकोण

2. स्थानिक दृष्टिकोण

3. विकल्पी दृष्टिकोण

4. उत्तरोत्तर दृष्टिकोण

Question ID : 5096476214

Status : Answered

Chosen Option : 1

Q.16 Who quoted the following on education?

“By education, I mean an all-round drawing out of the best in the child and man body, mind and spirit.”

Ans

1. Rabindranath Tagore

- 2. Sri Aurobindo
- 3. Mahatma Gandhi
- 4. Swami Vivekananda

Question ID : 5096476206
Status : Answered
Chosen Option : 2

Q.17 Muscular dystrophy is a type of:

- Ans
- 1. mental disorder
 - 2. learning disability
 - 3. attention deficit disorder
 - 4. locomotor impairment

Question ID : 5096476222
Status : Answered
Chosen Option : 4

Q.18 Which of the following is the third law of learning as per Thorndike?

- Ans
- 1. Law of Effect
 - 2. Law of Multiple Response
 - 3. Law of Exercise
 - 4. Law of Readiness

Question ID : 5096476208
Status : Answered
Chosen Option : 4

Q.19 भाषा के शिक्षक की निम्न में से क्या वांछनीय विशेषता नहीं है?

- Ans
- 1. प्रश्न पूछने का अच्छा कौशल होना
 - 2. केवल कक्षा के परिदृश्य में सीखने का अवसर देना
 - 3. विद्यार्थियों के मूल कार्यों की सराहना करना
 - 4. शिक्षार्थी अभिकेंद्रित कक्षा का निर्माण

Question ID : 5096476212
Status : Answered
Chosen Option : 2

Q.20 Which of the following theories of learning falls under connectionist theories (S-R)?

- Ans
- 1. Gestalt Theory
 - 2. Skinner's Operant Conditioning Theory
 - 3. Kurt-Lewin's Field Theory

✗ 4. Tolman's Sign Gestalt Theory

Question ID : 5096476209
Status : Answered
Chosen Option : 1

Section : Concerned Subject Knowledge

Q.1 Which of the following was NOT emphasised by the New Economic policy announced in 1985 by the then Government?

- Ans**
- ✗ 1.** Absorption of modern technology
 - ✗ 2.** Improvement in the productivity
 - ✓ 3.** Lesser role for the private Sector
 - ✗ 4.** Fuller utilisation of the capacity

Question ID : 5096476275
Status : Answered
Chosen Option : 3

Q.2 The second stage of the law of variable proportions is known as the stage of _____.

- Ans**
- ✗ 1.** increasing returns
 - ✓ 2.** decreasing returns
 - ✗ 3.** constant returns
 - ✗ 4.** negative returns

Question ID : 5096476230
Status : Answered
Chosen Option : 2

Q.3 Which of the following is NOT a criticism of the LPG Policy of 1991?

- Ans**
- ✗ 1.**
Loss of economic sovereignty to Indian corporate companies
 - ✗ 2.**
Relative neglect of agriculture as compared to industry and services
 - ✗ 3.** Increased dependency on foreign technology
 - ✓ 4.** Growing competitiveness of the Indian industrial sector

Question ID : 5096476277
Status : Answered
Chosen Option : 2

Q.4 निम्न में से किसकी मदद से अभावग्रस्तता की मूलभूत आर्थिक समस्या की व्याख्या की जा सकती है?

- Ans**
- ✗ 1.** क्षतिपूर्ति वक्र
 - ✓ 2.** उत्पादन संभाव्यता वक्र

✗ 3. मांग वक्र

✗ 4. उदासीनता वक्र

Question ID : 5096476224

Status : Answered

Chosen Option : 2

Q.5 मूल्य नेतृत्व के अन्तर्गत कीमत एवं प्रतिफल निर्धारण _____ का महत्वपूर्ण गुण है।

Ans ✗ 1. पूर्ण प्रतिस्पर्धा

✗ 2. एकाधिकारवादी प्रतिस्पर्धा

✓ 3. अल्पाधिकार

✗ 4. विशुद्ध प्रतिस्पर्धा

Question ID : 5096476235

Status : Answered

Chosen Option : 3

Q.6 The fourth round of trade negotiations under the WTO was held at _____.

Ans ✗ 1. Singapore

✗ 2. Geneva

✓ 3. Doha

✗ 4. Hong Kong

Question ID : 5096476266

Status : Answered

Chosen Option : 2

Q.7 The difference between what a consumer is willing to pay for a commodity and what he actually does pay for it, is known as:

Ans ✓ 1. consumer surplus

✗ 2. equilibrium price

✗ 3. price equivalent variation

✗ 4. compensatory variation

Question ID : 5096476231

Status : Answered

Chosen Option : 1

Q.8 The difference between the employed labour and the required labour is called _____.

Ans ✓ 1. disguised unemployment

✗ 2. cyclical unemployment

✗ 3. chronic unemployment

✗ 4. seasonal employment

Question ID : 5096476246
Status : Answered
Chosen Option : 1

Q.9 नीति आयोग के वर्तमान उपाध्यक्ष कौन हैं?

- Ans
- 1. नरेन्द्र मोदी
 - 2. अमिताभ कान्त
 - 3. अरुण जेटली
 - 4. राजीव कुमार

Question ID : 5096476270
Status : Answered
Chosen Option : 4

Q.10 Liquidity trap is a situation where the liquidity preference curve is _____.

- Ans
- 1. perfectly elastic
 - 2. perfectly inelastic
 - 3. vertical
 - 4. relatively elastic

Question ID : 5096476244
Status : Answered
Chosen Option : 4

Q.11 Find the correct ascending order of the following countries in human development as per the Human Development Report of 2018.

- Ans
- 1. India, China, Pakistan
 - 2. China, India, Pakistan
 - 3. Pakistan, India, China
 - 4. India, Pakistan, China

Question ID : 5096476281
Status : Answered
Chosen Option : 2

Q.12 The Phillips curve shows the trade-off between:

- Ans
- 1. total income and expenditure.
 - 2. the rate of unemployment and money wages.
 - 3. total savings and investment.
 - 4. aggregate supply and demand.

Question ID : 5096476243
Status : Answered

Q.13 A kinked demand curve of an oligopolist is:

Ans 1. elastic throughout.

2.

elastic in the upper portion, but inelastic in the lower portion.

3. inelastic throughout.

4.

inelastic in the upper portion and elastic in the lower portion.

Question ID : 5096476236

Status : Answered

Chosen Option : 2

Q.14 किसी देश पर अधिरोपित अतिरिक्त शुल्क जिसको कि अन्य देश ने निर्यात सब्सिडी के द्वारा निर्यात मूल्य घटाया हो, उसे कहते हैं:

Ans 1. निर्यात शुल्क

2. प्रतिकारी शुल्क

3. यथामूल्य शुल्क

4. यौगिक शुल्क

Question ID : 5096476260

Status : Answered

Chosen Option : 1

Q.15 Which graphical method is used to measure the distribution of wealth and income?

Ans 1. Lorenz curve

2. Ogive curve

3. Indifference curve

4. Offer curve

Question ID : 5096476269

Status : Answered

Chosen Option : 1

Q.16 Macroeconomics does NOT deal with:

Ans 1. the theory of economic growth.

2. theory of economic welfare.

3. the theory of income.

4. the general theory of prices.

Question ID : 5096476237

Status : Answered

Chosen Option : 4

Q.17 The foreign trade multiplier is also known as the _____.

- Ans
- 1. export-import multiplier
 - 2. Balance of Payments multiplier
 - 3. import multiplier
 - 4. export multiplier

Question ID : 5096476263
Status : Answered
Chosen Option : 2

Q.18 Which of the following is an important selective control by the central bank to regulate advances is?

- Ans
- 1. Open market operations
 - 2. Varying margin requirements
 - 3. Varying reserve ratios
 - 4. Manipulation of the bank rate

Question ID : 5096476252
Status : Answered
Chosen Option : 4

Q.19 To restrict private investment during the period of inflation, the RBI:

- Ans
- 1. stabilises the Cash Reserve Ratio
 - 2. increases the Cash Deposit Ratio
 - 3. decreases the Cash Reserve Ratio
 - 4. raises the Cash Reserve Ratio

Question ID : 5096476255
Status : Answered
Chosen Option : 4

Q.20 As pie diagram is a circular diagram, the total frequency of values is equal to _____.

- Ans
- 1. 90°
 - 2. 100°
 - 3. 360°
 - 4. 180°

Question ID : 5096476267
Status : Answered
Chosen Option : 3

Q.21 The National Sample Survey Organisation (NSSO) was established in _____.

- Ans
- 1. 1951

- 2. 1952
- 3. 1950
- 4. 1953

Question ID : 5096476268
Status : Answered
Chosen Option : 4

Q.22 The statement, "Welfare is said to increase or decrease if at least one percent is made better off or worse off with no change in the position of the others", was stated by _____.

- Ans
- 1. V Pareto
 - 2. N Kaldor
 - 3. JR Hicks
 - 4. WJ Baumol

Question ID : 5096476229
Status : Answered
Chosen Option : 3

Q.23 निम्न में से कौन सा कार्यक्रम उच्च शिक्षा को सुदृढ़ और उसमें सुधार के लिए आरंभ किया गया:

- Ans
- 1. राष्ट्रीय उच्चतर शिक्षा कार्यक्रम
 - 2. राष्ट्रीय साक्षरता मिशन
 - 3. राष्ट्रीय उच्चतर शिक्षा अभियान
 - 4. पढ़े भारत-बढ़े भारत

Question ID : 5096476228
Status : Answered
Chosen Option : 3

Q.24 Which of the following is NOT an assumption of Haberler's opportunity cost theory?

- Ans
- 1. Trade between two countries is completely free and un-restricted
 - 2. Factors are immobile between the countries
 - 3. Factors are completely mobile within the countries
 - 4. Price of each commodity is equal to fixed cost

Question ID : 5096476258
Status : Answered
Chosen Option : 4

Q.25 In which model of duopoly, each producer believes that his rival will keep his price constant?

- Ans
- 1. FY Edgeworth's model
 - 2. EH Chamberlin's model
 - 3. Joseph Bertrand's model

4. AA Cournot's model

Question ID : 5096476234
Status : Answered
Chosen Option : 1

Q.26 China introduced economic reforms in the year _____.

- Ans
- 1. 1975
 - 2. 1978
 - 3. 1991
 - 4. 1985

Question ID : 5096476279
Status : Answered
Chosen Option : 2

Q.27 प्रति वर्ष 3 प्रतिशत वार्षिक वृद्धि की कीमतों में टिकाऊ वृद्धि को _____ कहा जाता है।

- Ans
- 1. चलायमान मुद्रास्फीति
 - 2. मंद मुद्रास्फीति
 - 3. दौड़ती हुई मुद्रास्फीति
 - 4. द्रुत मुद्रास्फीति

Question ID : 5096476245
Status : Answered
Chosen Option : 1

Q.28 Which of the following reform measures was NOT introduced as a part of the New Economic Reforms of 1991?

- Ans
- 1. Reduction in fiscal deficit
 - 2. Cut in the interest rates
 - 3. Liberalisation of foreign trade
 - 4. Depreciation of the rupee

Question ID : 5096476276
Status : Answered
Chosen Option : 4

Q.29 An increase in private investment through an injection of fresh purchasing power in the form of an increase in public expenditure is known as _____.

- Ans
- 1. pump priming
 - 2. balanced budget
 - 3. surplus budget
 - 4. deficit budget

Question ID : 5096476273

Status : Answered
Chosen Option : 1

Q.30 Which of the following reform measures was NOT introduced as a part of the New Economic Reforms of 1991?

- Ans
- 1. Depreciation of the rupee
 - 2. Liberalisation of foreign trade
 - 3. Cut in the interest rates
 - 4. Reduction in fiscal deficit

Question ID : 5096476282
Status : Answered
Chosen Option : 1

Q.31 उत्पादन के प्रत्येक चरण में सामग्री प्रतिफल और आदान के मूल्य के बीच के अन्तर को _____ कहा जाता है।

- Ans
- 1. अंतरमाध्यमिक उपभोग
 - 2. अभिवृद्धि
 - 3. मूल्य संवर्धन
 - 4. अवमूल्यन

Question ID : 5096476239
Status : Answered
Chosen Option : 1

Q.32 Match List-I against List-II and select the correct answer using the codes given below:

	List I		List II
A	SEBI	1	2002
B	NSC	2	1999
C	IRDA	3	1988
D	CCI	4	1993

- Ans
- 1. A4, B1, C2, D3
 - 2. A1, B2, C3, D4
 - 3. A3, B2, C1, D4
 - 4. A3, C4, C2, D1

Question ID : 5096476257
Status : Answered
Chosen Option : 1

Q.33 The cost push inflation occurs when there is:

- Ans
- 1. an increase in demand.
 - 2. an increase in income of people.
 - 3. an increase in productivity of labour.

✓ 4. an increase in wages, profit margin and taxes.

Question ID : 5096476249
Status : Answered
Chosen Option : 4

Q.34 Under a monopolistic competition, the price elasticity of demand is _____.

- Ans
- ✗ 1. inelastic
 - ✗ 2. infinite
 - ✓ 3. elastic
 - ✗ 4. zero

Question ID : 5096476233
Status : Answered
Chosen Option : 3

Q.35 Match List-I against List-II and select the correct answer using the codes given below:

	List I		List II
A	B Ohlin	1	Factor endowment theory
B	Emmanuel	2	Comparative advantage theory
C	David Ricardo	3	Imitation gap theory
D	MV Posner	4	Unequal exchange theory

- Ans
- ✓ 1. A1, B4, C2, D3
 - ✗ 2. A1, B3, C2, D4
 - ✗ 3. A2, B3, C1, D4
 - ✗ 4. A1, B2, C3, D4

Question ID : 5096476261
Status : Answered
Chosen Option : 1

Q.36 In the indifference curve analysis, a consumer is in equilibrium when his budget line is:

- Ans
- ✗ 1. above the indifference curve.
 - ✓ 2. a tangent to the indifference curve.
 - ✗ 3. below the indifference curve.
 - ✗ 4. parallel to the indifference curve.

Question ID : 5096476227
Status : Answered
Chosen Option : 2

Q.37 The Central Bank of India was established in _____.

- Ans
- ✓ 1. 1935
 - ✗ 2. 1949
 - ✗ 3. 1955

✗ 4. 1965

Question ID : 5096476253
Status : Answered
Chosen Option : 1

Q.38 The existence of both, free market and government functioning in an economic system is called a _____.

- Ans
- ✗ 1. socialistic economy
 - ✗ 2. capitalist economy
 - ✓ 3. mixed economy
 - ✗ 4. communist economy

Question ID : 5096476225
Status : Answered
Chosen Option : 3

Q.39 In a three sector circular flow of Income, the government expenditure is considered as _____.

- Ans
- ✓ 1. an injection
 - ✗ 2. a leakage
 - ✗ 3. anti-inflationary
 - ✗ 4. unproductive

Question ID : 5096476240
Status : Answered
Chosen Option : 1

Q.40 Which of the following is NOT included in disposable income?

- Ans
- ✗ 1. Social security benefits
 - ✗ 2. Corporate dividends
 - ✗ 3. Transfer payments
 - ✓ 4. Personal income taxes

Question ID : 5096476238
Status : Answered
Chosen Option : 4

Q.41 पूंजीवादी अर्थव्यवस्था में क्या, कैसे और किसके लिए समस्याओं का समाधान किसके द्वारा किया जाता है:

- Ans
- ✗ 1. लोगों के द्वारा निर्वाचित जनप्रतिनिधियों।
 - ✗ 2. उत्पादकों के संघ।
 - ✗ 3. केंद्रीय योजना आयोग।
 - ✓ 4. मूल्य प्रणाली।

Question ID : 5096476223

Status : Answered
Chosen Option : 4

Q.42 Which method helps in public borrowing policy of the government?

- Ans
- 1. Selective credit control
 - 2. Bank rate policy
 - 3. Variable cash reserve ratio
 - 4. Open market operations

Question ID : 5096476250
Status : Answered
Chosen Option : 4

Q.43 If a demand curve is a rectangular hyperbola, it indicates:

- Ans
- 1. relatively elastic demand.
 - 2. perfectly elastic demand.
 - 3. unitary elastic demand.
 - 4. perfectly inelastic demand.

Question ID : 5096476226
Status : Answered
Chosen Option : 3

Q.44 निम्न में से क्या भुगतान संतुलन को सही करने का उपाय नहीं है?

- Ans
- 1. बाह्य लागत
 - 2. अवमूल्यन
 - 3. प्रत्यक्ष नियंत्रण
 - 4. व्यय बंद करने की नीतियां

Question ID : 5096476262
Status : Answered
Chosen Option : 2

Q.45 The health insurance coverage to each applicable beneficiary family under Ayushman Bharat is upto _____.

- Ans
- 1. ₹ 1 lakh
 - 2. ₹ 2 lakh
 - 3. ₹ 5 lakh
 - 4. ₹ 10 lakh

Question ID : 5096476272
Status : Answered
Chosen Option : 3

Q.46 The first phase of nationalisation of commercial banks started in the year _____.

- Ans
- 1. 1970
 - 2. 1969
 - 3. 1979
 - 4. 1980

Question ID : 5096476254
Status : Answered
Chosen Option : 2

Q.47 According to Keynes, the level of employment is determined by the _____.

- Ans
- 1. effective demand
 - 2. savings
 - 3. consumption
 - 4. investment

Question ID : 5096476242
Status : Answered
Chosen Option : 1

Q.48 विश्व विदेशी मुद्रा विनिमय बाजार में एकल विनिमय दर बनाए रखने के लिए मुद्राओं के विदेशी विनिमय दरों में अंतर को दूर करने के लिए निम्न में से किसका इस्तेमाल किया जाता है?

- Ans
- 1. अंतरपणन
 - 2. पुनर्मूल्यांकन
 - 3. हेजिंग प्रतिकार
 - 4. अवमूल्यन

Question ID : 5096476264
Status : Answered
Chosen Option : 3

Q.49 High power money is referred to as:

- Ans
- 1. a bank's reserves at the central bank.

2.

the sum of the currency held by the public and commercial banks' reserves.

- 3. the money held by banks.
- 4. the total loans and advances of banks.

Question ID : 5096476251
Status : Answered
Chosen Option : 2

Q.50 Which is the simplest method of studying trend in time series analysis?

- Ans
- 1. Least square method
 - 2. Semi-averages method

3. Free hand method
 4. Moving averages method

Question ID : 5096476271
Status : Answered
Chosen Option : 1

Q.51 The concept of inflationary gap was coined by _____.

- Ans 1. JR Hicks
 2. AW Phillips
 3. JM Keynes
 4. Milton Friedman

Question ID : 5096476248
Status : Answered
Chosen Option : 3

Q.52 The concept of multiplier expresses the ratio between change in:

- Ans 1. investment and change in income.
 2. savings and change in investment.
 3. investment and change in consumption.
 4. income and change in consumption.

Question ID : 5096476247
Status : Answered
Chosen Option : 2

Q.53 निम्न में से क्या 1991 के आर्थिक सुधारों का सकारात्मक प्रभाव नहीं था?

- Ans 1. मुद्रास्फीति दर में कमी
 2. उपभोक्तावाद को प्रोत्साहन
 3. जीडीपी विकास दर में वृद्धि
 4. राजकोषीय घाटे में गिरावट

Question ID : 5096476278
Status : Answered
Chosen Option : 1

Q.54 Economic reforms in China started with the reforms in _____.

- Ans 1. agriculture
 2. foreign trade
 3. industry
 4. services

Question ID : 5096476280
Status : Answered
Chosen Option : 3

Q.55 The present Governor of Reserve Bank Of India (from 12 December 2018) is _____.

- Ans
- 1. Viswanathan
 - 2. Raghuram Rajan
 - 3. Saktikanta Das
 - 4. Urjit Patel

Question ID : 5096476256
Status : Answered
Chosen Option : 3

Q.56 The Theory of Availability in international trade was propounded by _____.

- Ans
- 1. SB Linder
 - 2. R Vernon
 - 3. IB Kravis
 - 4. PB Kenen

Question ID : 5096476259
Status : Answered
Chosen Option : 1

Q.57 When the demand elasticities of exports and imports are less than the supply elasticities for exports and imports, then which of the following is likely to occur?

- Ans
- 1. Devaluation adversely affects the terms of trade
 - 2. No impact of valuation on the terms of trade
 - 3. Devaluation favourably affects the terms of trade
 - 4. Elasticities no longer relate to the terms of trade

Question ID : 5096476265
Status : Answered
Chosen Option : 1

Q.58 Among the following, which does NOT come under a progressive tax?

- Ans
- 1. Excise tax
 - 2. Income tax
 - 3. Corporate tax
 - 4. Property tax

Question ID : 5096476274
Status : Answered
Chosen Option : 3

Q.59

यदि सभी कारकों को उनके सीमान्त उत्पादों के बराबर प्रोत्साहन दिया जाए तो कुल उत्पादों की समाप्ति को क्या कहा जायेगा?

Ans

- 1. आधिक्य क्षमता
- 2. सीमान्त उत्पादकता
- 3. जोखिम पुरस्कार
- 4. वृद्धिकारक समस्या

Question ID : 5096476232

Status : Answered

Chosen Option : 2

Q.60 Which of the following is an example of a government transfer payment?

Ans

- 1. Imputed rent of an owner occupied house
- 2. Purchase of a new computer
- 3. Unemployment allowance to unemployed persons
- 4. Salary paid to the members of Parliament

Question ID : 5096476241

Status : Answered

Chosen Option : 3



Latest Sarkari jobs, Govt Exam alerts, Results and Vacancies

- ▶ Latest News and Notification
- ▶ Exam Paper Analysis
- ▶ Topic-wise weightage
- ▶ Previous Year Papers with Answer Key
- ▶ Preparation Strategy & Subject-wise Books

To know more [Click Here](#)



www.prepp.in