



# JEE (MAIN) 2024

MEMORY BASED QUESTIONS & SOLUTIONS

SHIFT-1

**DATE & DAY:** 31<sup>th</sup> January 2024 & Wednesday

**PAPER-1**

**Duration:** 3 Hrs.  
**Time:** 09:00 - 12:00 IST

**SUBJECT: PHYSICS**

**ADMISSIONS OPEN FOR CLASS 12+**

ACADEMIC SESSION 2024-25



**TARGET: JEE (ADV.) 2024**

For Class XII Passed Student

**VISHESH COURSE**

MODE: OFFLINE/ONLINE



CLASS STARTS  
08<sup>th</sup> APRIL, 2024



**TARGET: JEE (MAIN) 2024**

For Class XII Passed Student

**ABHYAAS COURSE**

MODE: OFFLINE/ONLINE



CLASS STARTS  
08<sup>th</sup> APRIL, 2024

**SCHOLARSHIP ON THE BASIS OF JEE (MAIN) 2024 %ILE/AIR**

REGISTERED & CORPORATE OFFICE (CIN: U80302RJ2007PLC024029):

CG Tower, A-46 & 52, IPIA, Near City Mall, Jhalawar Road, Kota (Rajasthan) - 324005


0744-2777777 | 73400 10345 | contact@resonance.ac.in | www.resonance.ac.in | Follow Us: @ResonanceEdu | @Resonance\_Edu

This solutions was download from Resonance JEE (Main) 2024 Solution Portal

Resonance® | JEE(Main) 2024 | DATE : 31-01-2024 (SHIFT-1) | PAPER-1 | MEMORY BASED | PHYSICS

## PART : PHYSICS

1. Two charge  $Q$  and  $3Q$  are kept in a line separated by a distance  $R$ . If electric field is zero at a distance  $x$  from  $Q$ . Find the value of  $x$



- (1)  $\left(\frac{K}{4}\right)$       (2)  $\left(\frac{K}{3}\right)$       (3)  $(\sqrt{3}-1)R$       (4)  $\left(\frac{\sqrt{3}-1}{2}\right)R$

Ans. (4)

Sol.  $E = \frac{KQ}{R^2}$

$$\frac{KQ}{x^2} = \frac{K3Q}{(R-x)^2}$$

$$\frac{1}{x} = \frac{\sqrt{3}}{R-x}$$

$$R-x = \sqrt{3}x$$

$$R = (1+\sqrt{3})x$$

$$x = \left(\frac{1}{1+\sqrt{3}}\right)R$$

$$x = \left(\frac{\sqrt{3}-1}{2}\right)R$$

2. Stopping potential for a surface is 8V if wavelength of incident light is  $\lambda$  and it is 2V for wavelength  $3\lambda$ . Find threshold wavelength for the surface.

- (1)  $3\lambda$       (2)  $9\lambda$       (3)  $\frac{27}{32}\lambda$       (4)  $18\lambda$

Ans. (2)

Sol.  $eV_s = \frac{hc}{\lambda} - \frac{hc}{\lambda_{th}}$

$$\Rightarrow 8eV = \frac{hc}{\lambda} - \frac{hc}{\lambda_{th}} \quad \dots(1)$$

$$2eV = \frac{hc}{3\lambda} - \frac{hc}{\lambda_{th}} \quad \dots(2)$$

From (1) and (2)

$$\lambda_{th} = 9\lambda$$

## Resonance Eduventures Ltd.

Reg. Office & Corp. Office : CG Tower, A-46 & 52, IPIA, Near City Mall, Jhalawar Road, Kota (Raj.) - 324005

Ph. No.: +91-744-2777777, 2777700 | FAX No. : +91-022-39167222

To Know more : sms RESO at 56677 | Website : www.resonance.ac.in | E-mail : contact@resonance.ac.in | CIN : U80302RJ2007PLC024029

Toll Free : 1800 258 5555 | WhatsApp : 7340010333 | Facebook : facebook.com/ResonanceEdu | Twitter : twitter.com/ResonanceEdu | YouTube : www.youtube.com/reswatch | Blog : blog.resonance.ac.in

This solution was download from Resonance JEE(Main) 2024 Solution portal

PAGE # 1

Resonance® | JEE(Main) 2024 | DATE : 31-01-2024 (SHIFT-1) | PAPER-1 | MEMORY BASED | PHYSICS

3. If mass defect in a nuclear reaction is 0.4 g then find Q - value.

- (1)  $3.6 \times 10^{12}$  J      (2)  $18 \times 10^{12}$  J      (3)  $36 \times 10^{12}$  J      (4)  $27 \times 10^{12}$  J

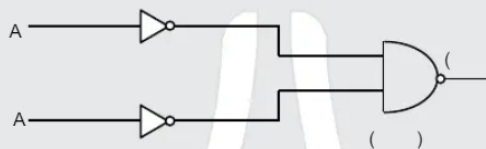
Ans. (3)

Sol.  $Q = \Delta mc^2$

$$Q = \left(\frac{4}{10}\right) \times 10^{-3} (3 \times 10^8)^2$$

$$Q = 36 \times 10^{12} \text{ J}$$

4. Output of given circuit represents which logic gate



- (1) NAND Gate      (2) NOR Gate  
(3) OR Gate      (4) AND Gate

Ans. (3)

Sol.  $\overline{\overline{A} \cdot \overline{B}} = \overline{\overline{A+B}} = A+B$

5. Find min deviation in a prism if refractive index  $\mu = \cot(A/2)$ . Here A represents angle of prism.

- (1)  $\pi - A$                       (2)  $\pi - 2A$                       (3)  $\frac{\pi}{2} - 2A$                       (4)  $\frac{\pi}{2} - \frac{A}{2}$

Ans. (2)

Sol.  $\mu = \cot\left(\frac{A}{2}\right) \Rightarrow \frac{\cos\frac{A}{2}}{\sin\frac{A}{2}} = \frac{\sin\left(\frac{\delta_{\min} + A}{2}\right)}{\frac{\sin A}{2}}$

$\sin\left(\frac{\delta_{\min} + A}{2}\right) = \cos\frac{A}{2} \Rightarrow \sin\left(\frac{\pi}{2} - \frac{A}{2}\right)$

$\frac{\delta_{\min} + A}{2} = \frac{\pi}{2} - \frac{A}{2} \Rightarrow \delta_{\min} = \pi - 2A$

## Resonance Eduventures Ltd.

Reg. Office & Corp. Office : CG Tower, A-46 & 52, IPIA, Near City Mall, Jhalawar Road, Kota (Raj.) - 324005

Ph. No.: +91-744-2777777, 2777700 | FAX No. : +91-022-39167222

To Know more : sms RESO at 56677 | Website: www.resonance.ac.in | E-mail : contact@resonance.ac.in | CIN : U80302RJ2007PLC024029

Toll Free : 1800 258 5555    7340010333    facebook.com/ResonanceEdu    twitter.com/ResonanceEdu    www.youtube.com/resawatch    blog.resonance.ac.in

This solution was download from Resonance JEE(Main) 2024 Solution portal

PAGE # 2

6. At a particular temperature, which of the following quantity is same for all gases?

- (1) Average kinetic energy  
(2) Average Speed  
(3) R.M.S. Velocity  
(4) Average Momentum

Ans. (4)

Sol. at any temperature average velocity is zero. So average momentum will be zero for any gas.

7. A coin is placed on a circular disc at a distance 'r', the friction coefficient between them is  $\mu$ , the maximum angular velocity with which the disc can rotate without slipping of coin

- (1)  $\sqrt{\frac{2\mu g}{r}}$                       (2)  $\sqrt{\mu g r}$                       (3)  $\sqrt{\frac{\mu g}{r}}$                       (4)  $\sqrt{\frac{3\mu g}{r}}$

Ans. (3)

Sol.  $N = mg$

$f = mw^2r$

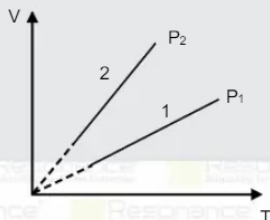
$f \leq \mu N$  (For no slipping)

$\Rightarrow \mu(mg) \geq mw^2r$

$\Rightarrow w^2 \leq \frac{\mu g}{r}$

$\Rightarrow w_{\max} = \sqrt{\frac{\mu g}{r}}$

8. Find relation between  $P_1$  and  $P_2$



- (1)  $P_2 < P_1$                       (2)  $P_2 > P_1$                       (3)  $P_1 = P_2$                       (4) None of these

Ans. (1)

Sol.  $PV = nRT$

$$\frac{V}{T} = \left(\frac{nR}{P}\right)$$

$$(\text{Slope})_2 > (\text{Slope})_1$$

$$\therefore P_2 < P_1$$

## Resonance Eduventures Ltd.

Reg. Office & Corp. Office : CG Tower, A-46 & 52, IPIA, Near City Mall, Jhalawar Road, Kota (Raj.) - 324005

Ph. No.: +91-744-2777777, 2777700 | FAX No. : +91-022-39167222

To Know more : sms RESO at 56677 | Website : www.resonance.ac.in | E-mail : contact@resonance.ac.in | CIN : U80302RJ2007PLC024029

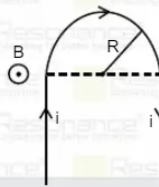
Toll Free : 1800 258 5555 | 7340010333 | facebook.com/ResonanceEdu | twitter.com/ResonanceEdu | www.youtube.com/resawatch | blog.resonance.ac.in

This solution was download from Resonance JEE(Main) 2024 Solution portal

PAGE # 3

Resonance Eduventures Ltd. | JEE(Main) 2024 | DATE : 31-01-2024 (SHIFT-1) | PAPER-1 | MEMORY BASED | PHYSICS

9. A current carrying wire is placed in an uniform external magnetic field as shown. Find the magnetic force on the given wire.



(1)  $BiR$  up

(2)  $2BiR$  up

(3)  $BiR$  down

(4)  $2BiR$  down

Ans. (4)

Sol.  $F = Bi\ell = Bi2R$  down

10. A block is performing SHM of amplitude  $A$ . When it is at distance  $\frac{2A}{3}$  from the mean position, its velocity is tripled by applying an impulse. Find the new amplitude of motion.

(1)  $\frac{3A}{7}$

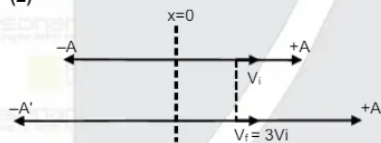
(2)  $\frac{7A}{3}$

(3)  $\frac{5A}{3}$

(4)  $\frac{3A}{5}$

Ans. (2)

Sol.



Velocity of at  $x = \frac{2A}{3}$ ,

$$V_i = \omega \sqrt{A^2 - \left(\frac{2A}{3}\right)^2}$$

When velocity of oscillation at  $x = \frac{2A}{3}$ , become tripled. Then suppose  $A'$  becomes new amplitude of oscillation.

$$\therefore V_f = 3V_i$$

$$\omega \sqrt{A'^2 - \left(\frac{2A}{3}\right)^2} = 3 \times \omega \sqrt{A^2 - \left(\frac{2A}{3}\right)^2}$$

$$(A')^2 - \frac{4A^2}{9} = 5A^2$$

$$(A')^2 = \frac{49A^2}{9}$$

$$A' = \frac{7A}{3}$$

## Resonance Eduventures Ltd.

Reg. Office & Corp. Office : CG Tower, A-46 & 52, IPIA, Near City Mall, Jhalawar Road, Kota (Raj.) - 324005

Ph. No.: +91-744-2777777, 2777700 | FAX No. : +91-022-39167222

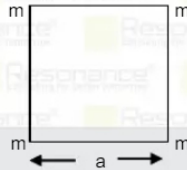
To Know more : sms RESO at 56677 | Website : www.resonance.ac.in | E-mail : contact@resonance.ac.in | CIN : U80302RJ2007PLC024029

Toll Free : 1800 258 5555 | 7340010333 | facebook.com/ResonanceEdu | twitter.com/ResonanceEdu | www.youtube.com/resawatch | blog.resonance.ac.in

This solution was download from Resonance JEE(Main) 2024 Solution portal

PAGE # 4

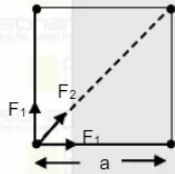
11. Four equal masses  $m$  are kept at corners of a square of side  $a$ . If magnitude of net gravitational force on any one mass is given by  $\left(\frac{2\sqrt{2}+1}{32}\right)\frac{Gm^2}{L^2}$ . Find the value of  $a$  in terms of  $L$ .



- (1)  $a = 2L$       (2)  $a = 4L$       (3)  $a = 8L$       (4)  $a = 16L$

Ans. (2)

Sol.



$$F_1 = \frac{Gm^2}{a^2}, F_2 = \frac{Gm^2}{2a^2}$$

$$F_{\text{net}} = \frac{Gm^2}{a^2} \frac{(2\sqrt{2}+1)}{2} = \left(\frac{2\sqrt{2}+1}{32}\right) \frac{Gm^2}{L^2}$$

$$a = 4L \text{ Ans.}$$

12. If a object of volume  $V$  is kept in water of density  $\rho=10^3 \text{ Kg/m}^3$  at depth  $h$  then percentage change in volume is 0.02% find value of  $h$ . (Bulk modulus =  $9 \times 10^8 \text{ N/m}^2$ )

- (1) 3 m      (2) 9 m      (3) 18 m      (4) 12 m

Ans. (3)

Sol.  $B = \frac{\Delta P}{\Delta V/V}$

$$\Delta P = B \left( -\frac{\Delta V}{V} \right)$$

$$\Rightarrow h\rho g = 9 \times 10^8 \left( \frac{0.02}{100} \right)$$

$$\Rightarrow 10^3 \times 10 \text{ h} = 18 \times 10^4$$

$$\Rightarrow h = 18\text{m}$$

## Resonance Eduventures Ltd.

Reg. Office & Corp. Office : CG Tower, A-46 & 52, IPIA, Near City Mall, Jhalawar Road, Kota (Raj.) - 324005

Ph. No.: +91-744-2777777, 2777700 | FAX No. : +91-022-39167222

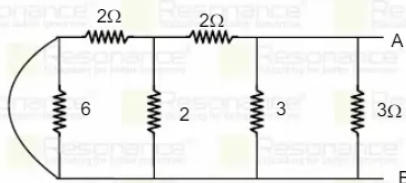
To Know more : sms RESO at 56677 | Website : www.resonance.ac.in | E-mail : contact@resonance.ac.in | CIN : U80302RJ2007PLC024029

Toll Free : 1800 258 5555 | 7340010333 | [facebook.com/ResonanceEdu](https://www.facebook.com/ResonanceEdu) | [twitter.com/ResonanceEdu](https://twitter.com/ResonanceEdu) | [www.youtube.com/resawatch](https://www.youtube.com/resawatch) | [blog.resonance.ac.in](https://www.resonance.ac.in/blog)

This solution was download from Resonance JEE(Main) 2024 Solution portal

PAGE # 5

- 13.



Find equivalent resistance of the circuit between A & B.

- (1)  $2\ \Omega$                       (2)  $3\ \Omega$                       (3)  $4\ \Omega$                       (4)  $1\ \Omega$

Ans. (4)

Sol.  $6\ \Omega$  resistance is shorted  
so  $R_{eq} = 1\ \Omega$

14. A ball is dropped in glycerine. Draw velocity time graph



Ans. (2)

Sol. Initially ball is at rest later velocity will increase and reaches up to terminal velocity due to viscous force.

15. If the fundamental frequency of closed organ pipe of length  $\ell$  is same as  $1^{\text{st}}$  overtone of another open organ pipe of length 60 cm, then find  $\ell$ .

- (1) 15 cm                      (2) 30 cm                      (3) 45 cm                      (4) 20 cm

Ans. (1)

Sol.  $f = \frac{v}{4\ell} = \frac{2v}{2(60)}$   
 $\Rightarrow \frac{1}{4\ell} = \frac{1}{60}$   
 $\Rightarrow \ell = 15\ \text{cm}$

## Resonance Eduventures Ltd.

Reg. Office & Corp. Office : CG Tower, A-46 & 52, IPIA, Near City Mall, Jhalawar Road, Kota (Raj.) - 324005

Ph. No.: +91-744-2777777, 2777700 | FAX No. : +91-022-39167222

To Know more : sms RESO at 56677 | Website : www.resonance.ac.in | E-mail : contact@resonance.ac.in | CIN : U80302RJ2007PLC024029

Toll Free : 1800 258 5555    7340010333    facebook.com/ResonanceEdu    twitter.com/ResonanceEdu    www.youtube.com/resawatch    blog.resonance.ac.in

This solution was download from Resonance JEE(Main) 2024 Solution portal

PAGE # 6

| JEE(Main) 2024 | DATE : 31-01-2024 (SHIFT-1) | PAPER-1 | MEMORY BASED | PHYSICS

16. An artillery of mass  $m_1$  resting on smooth horizontal ground carries a shell of mass  $m_2$ . The artillery fires the shell horizontally. Find the ratio of kinetic energy of artillery and shell just after firing.

- (1)  $\frac{m_1}{m_2}$                       (2)  $\frac{m_2}{m_1}$                       (3)  $\sqrt{\frac{m_2}{m_1}}$                       (4)  $\sqrt{\frac{m_1}{m_2}}$

Ans. (2)

Sol.  $m_1 v_1 = m_2 v_2 \Rightarrow \frac{m_1}{m_2} = \frac{v_2}{v_1}$

$$\frac{KE_{Ar}}{KE_{shell}} = \frac{\frac{1}{2} m_1 v_1^2}{\frac{1}{2} m_2 v_2^2} = \frac{m_2}{m_1}$$

17.



Find ratio of energy stored in capacitor in two cases.

- (1)  $k$                       (2)  $\frac{1}{k}$                       (3)  $k^2$                       (4)  $\frac{1}{k^2}$

Ans. (2)

Sol.  $E_1 = \frac{1}{2} cv^2$

$$E_2 = \frac{1}{2} (kc) v^2$$

$$\frac{E_1}{E_2} = \frac{1}{k}$$

18. If force  $F = ax^2 + bt^{1/2}$ , where  $x$  and  $t$  represent the position and time respectively.

Find the dimension of  $\frac{b^2}{a}$ .

- (1)  $[M^1 L^1 T^{-2}]$       (2)  $[M^2 L^1 T^{-1}]$       (3)  $[M^1 L^3 T^{-1}]$       (4)  $[M^1 L^3 T^{-3}]$






Ans. (4)

## Resonance Eduventures Ltd.

Reg. Office & Corp. Office : CG Tower, A-46 & 52, IPIA, Near City Mall, Jhalawar Road, Kota (Raj.) - 324005


Ph. No.: +91-744-2777777, 2777700 | FAX No. : +91-022-39167222

To Know more : sms RESO at 56677 | Website : www.resonance.ac.in | E-mail : contact@resonance.ac.in | CIN : U80302RJ2007PLC024029

Toll Free : 1800 258 5555     7340010333     facebook.com/ResonanceEdu     twitter.com/ResonanceEdu     www.youtube.com/resawatch     blog.resonance.ac.in

This solution was download from Resonance JEE(Main) 2024 Solution portal

PAGE # 7

 | JEE(Main) 2024 | DATE : 31-01-2024 (SHIFT-1) | PAPER-1 | MEMORY BASED | PHYSICS

Sol.  $F = ax^2 + bt^{1/2}$

$$\therefore [F] = [ax^2] = [bt^{1/2}]$$

$$[M L T^{-2}] = [aL^2] \quad [a] = [M L^{-1} T^{-2}]$$

Similarly

$$\text{If } [F] = [bt^{1/2}]$$

$$[M L T^{-2}] = [bt^{1/2}] \Rightarrow [b] = [M L T^{-5/2}]$$

$$\therefore \left[ \frac{b^2}{a} \right] = \left[ \frac{M^2 L^2 T^{-5}}{M L^{-1} T^{-2}} \right] = [M L^3 T^{-3}]$$

19. The percentage error in measurement of length & radius of a cylindrical wire is 0.1% each. Find percentage error in measurement of resistance of wire.

- (1) 0.5 %      (2) 0.2 %      (3) 0.3 %      (4) 0.05 %

Ans. (3)

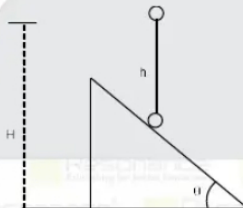
Sol.  $R = \frac{\ell \rho}{A} = \frac{\ell \rho}{\pi(r^2)}$

$$= \frac{\Delta \ell}{\ell} + \frac{2\Delta r}{r}$$

$$= 0.1\% + 0.2\%$$

$$= 0.3\%$$

20. A ball is dropped from height  $H$  above the ground and it strikes an inclined plane after falling through height  $h$ . Find ratio  $\frac{H}{h}$  so that ball will take maximum time to reach ground.



- (1) 1      (2) 3      (3) 2      (4) 5

Ans. (3)

## Resonance Eduventures Ltd.

Reg. Office & Corp. Office : CG Tower, A-46 & 52, IPIA, Near City Mall, Jhalawar Road, Kota (Raj.) - 324005

Ph. No.: +91-744-2777777, 2777700 | FAX No. : +91-022-39167222

To Know more : sms RESO at 56677 | Website : www.resonance.ac.in | E-mail : contact@resonance.ac.in | CIN : U80302RJ2007PLC024029

Toll Free : 1800 258 5555 | 7340010333 | [facebook.com/ResonanceEdu](https://www.facebook.com/ResonanceEdu) | [twitter.com/ResonanceEdu](https://twitter.com/ResonanceEdu) | [www.youtube.com/resawatch](https://www.youtube.com/resawatch) | [blog.resonance.ac.in](https://blog.resonance.ac.in)

This solution was download from Resonance JEE(Main) 2024 Solution portal

PAGE # 8

Resonance® | JEE(Main) 2024 | DATE : 31-01-2024 (SHIFT-1) | PAPER-1 | MEMORY BASED | PHYSICS

Sol.  $t = \sqrt{\frac{2(H-h)}{g}} + \sqrt{\frac{2h}{g}}$

$$\frac{dt}{dh} = \frac{\sqrt{2}}{\sqrt{g}} \left( \frac{1}{2\sqrt{h}} - \frac{1}{2\sqrt{H-h}} \right) = 0$$

$$2\sqrt{h} = 2\sqrt{H-h}$$

$$h = H-h$$

$$\frac{h}{H} = \frac{1}{2}$$

$$\frac{H}{h} = 2$$

21. If ratio of intensity of light from two sources are 1:9 then find the resultant intensity ratio if sources are coherent with phase difference is  $60^\circ$  in one case and incoherent in the other case

(1) 1 : 1                      (2) 10 : 13                      (3) 13 : 10                      (4) 26 : 13

Ans. (3)

Sol.  $I_{re} = I_1 + I_2 + 2\sqrt{I_1 I_2} \cos \Delta\phi$

$$I_{re} = 1 + 9 + 2\sqrt{9} \times \frac{1}{2}$$

$$I_{re} = 13 I$$

For Incoherence

$$I_{ri} = I_1 + I_2$$

$$I_{ri} = 10 I$$

$$\frac{I_{re}}{I_{ri}} = \frac{13}{10}$$

22. A plane EM wave has electric field amplitude 50 V/m. Find its average energy density.

$$(\epsilon_0 = 8.85 \times 10^{-12} \text{ C}^2/\text{Nm}^2)$$

(1)  $11.06 \times 10^{-9} \text{ J/m}^3$

(2)  $11.06 \times 10^{-8} \text{ J/m}^3$

(3)  $11.06 \times 10^{-10} \text{ J/m}^3$

(4)  $11.06 \times 10^{-7} \text{ J/m}^3$

Ans. (1)

Sol.  $(E_A)E = \frac{1}{2} \epsilon_0 E_0^2$

$$= \frac{1}{2} \times 8.85 \times 10^{-12} \times 50 \times 50$$

$$= 11.06 \times 10^{-9} \text{ J/m}^3$$

## Resonance Eduventures Ltd.

Reg. Office & Corp. Office : CG Tower, A-46 & 52, IPIA, Near City Mall, Jhalawar Road, Kota (Raj.) - 324005

Ph. No.: +91-744-2777777, 2777700 | FAX No. : +91-022-39167222

To Know more : sms RESO at 56677 | Website : www.resonance.ac.in | E-mail : contact@resonance.ac.in | CIN : U80302RJ2007PLC024029

Toll Free : 1800 258 5555 | 7340010333 | [facebook.com/ResonanceEdu](https://www.facebook.com/ResonanceEdu) | [twitter.com/ResonanceEdu](https://twitter.com/ResonanceEdu) | [www.youtube.com/resawatch](https://www.youtube.com/resawatch) | [blog.resonance.ac.in](https://blog.resonance.ac.in)

This solution was download from Resonance JEE(Main) 2024 Solution portal

PAGE # 9



23. In relation b/w time 't' and distance 'x' is  $t = ax^2 + bx$ . a, b are constant, find acceleration

- (1)  $\frac{-a}{(2ax+b)^3}$       (2)  $\frac{-2a}{(2ax+b)^3}$       (3)  $\frac{-2a}{(2ax+b)^2}$       (4)  $\frac{-a}{(2ax+b)^2}$

Ans. (2)

Sol.  $t = ax^2 + bx$

$$\frac{dt}{dt} = a \frac{dx^2}{dt} + b \frac{dx}{dt} = 2axv + bv$$

$$1 = 2axv + bv$$

$$v = \frac{1}{2ax+b}$$

$$\frac{dv}{dx} = \frac{-2a}{(2ax+b)^2} = -2av^2$$

$$a = v \frac{dv}{dx} = -2av^3 = \frac{-2a}{(2ax+b)^3}$$

24. Find absolute work done to stop the disc rolling on horizontal surface with 0.4 m/s velocity having mass 50 Kg and radius R

- (1) 4J      (2) 2J      (3) 6J      (4) 8J

Ans. (3)

Sol.  $W = K.E$  of disc

$$W = \frac{1}{2}mv^2 + \frac{1}{2}I\omega^2 = \frac{3}{4}mv^2 = 6J$$

25. A parallel plate capacitor with separation between the plates 5mm, is charged by battery. Now if a dielectric slab of thickness 2mm is filled between the plates, charge increases by 25% then find dielectric constant of slab.

- (1) 1      (2) 5      (3) 2      (4) 3

Ans. (3)

$$\text{Sol. } Q_i = CV = \left( \frac{E_0 A}{d} \right) V$$

$$Q_f = \left( \frac{E_0 A}{(d-t) + \frac{t}{k}} \right) V$$

$$\frac{Q_f - Q_i}{Q_i} \times 100 = 25$$

## Resonance Eduventures Ltd.

Reg. Office & Corp. Office : CG Tower, A-46 & 52, IPIA, Near City Mall, Jhalawar Road, Kota (Raj.) - 324005

Ph. No.: +91-744-2777777, 2777700 | FAX No. : +91-022-39167222

To Know more : sms RESO at 56677 | Website : www.resonance.ac.in | E-mail : contact@resonance.ac.in | CIN : U80302RJ2007PLC024029

Toll Free : 1800 258 5555 | 7340010333 | Facebook.com/ResonanceEdu | Twitter.com/ResonanceEdu | www.youtube.com/resawatch | Blog.resonance.ac.in

This solution was download from Resonance JEE(Main) 2024 Solution portal

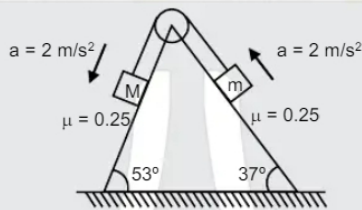
PAGE # 10

$$\Rightarrow \frac{Q_f}{Q_i} - 1 = \frac{1}{4} \Rightarrow \frac{d}{d-t+\frac{t}{k}} = \frac{5}{4}$$

$$\Rightarrow 4d = 5d - 5t + \frac{5t}{k}$$

$$\Rightarrow k = 2$$

26. Find the value of m if M = 10 kg. All surfaces are rough



- (1) 6.5 kg                      (2) 2.5 kg                      (3) 7.0 kg                      (4) 4.5 kg

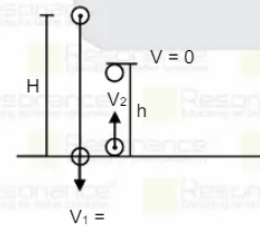
Ans. (4)

Sol.  $Mg(\sin 53^\circ - \mu \cos 53^\circ) - T = 2M$   
 $T - mg(\sin 37^\circ + \mu \cos 37^\circ) = 2m$   
 $100\left(\frac{4}{5} - \frac{1}{4} \times \frac{3}{5}\right) - m \times 10\left(\frac{3}{5} + \frac{1}{4} \times \frac{4}{5}\right) = 20 + 2m$   
 $80 - 15 - 20 = 2m + 8m$   
 $m = \frac{45}{10} = 4.5 \text{ kg}$

27. A ball dropped from height H rebounds up to height h after colliding with horizontal surface. If coefficient of restitution for collision is  $e = \frac{1}{2}$  then  $\frac{H}{h}$  is :

- (1) 4                      (2)  $\frac{1}{4}$                       (3) 2                      (4)  $\frac{1}{2}$

Ans. (1)



$V_2 = eV_1$   
 $\sqrt{2gh} = e\sqrt{2gH}$   
 $h = e^2H = \frac{H}{4}$

## Resonance Eduventures Ltd.

Reg. Office & Corp. Office : CG Tower, A-46 & 52, IPIA, Near City Mall, Jhalawar Road, Kota (Raj.) - 324005

Ph. No.: +91-744-2777777, 2777700 | FAX No. : +91-022-39167222

To Know more : sms RESO at 56677 | Website : www.resonance.ac.in | E-mail : contact@resonance.ac.in | CIN : U80302RJ2007PLC024029

Toll Free : 1800 258 5555 | 7340010333 | Facebook.com/ResonanceEdu | Twitter.com/ResonanceEdu | www.youtube.com/resawatch | Blog.resonance.ac.in

This solution was download from Resonance JEE(Main) 2024 Solution portal

PAGE # 11

### Resonance® | JEE(Main) 2024 | DATE : 31-01-2024 (SHIFT-1) | PAPER-1 | MEMORY BASED | PHYSICS

28. Two resistors of equal resistance have thermal coefficient of resistance  $\alpha_1$  &  $\alpha_2$  respectively. If they are connected in series and then in parallel, find  $\alpha_{eq}$  for series and parallel combination respectively.

- (1)  $\alpha_1 + \alpha_2, \frac{\alpha_1\alpha_2}{\alpha_1 + \alpha_2}$                       (2)  $\frac{\alpha_1 + \alpha_2}{2}$   
 (3)  $\frac{\alpha_1 + \alpha_2}{2}, \frac{\alpha_1 + \alpha_2}{2}$                       (4)  $\frac{\alpha_1 + \alpha_2}{2}, \frac{\alpha_1 + \alpha_2}{\alpha_1 + \alpha_2}$

Ans. (3)

Sol. In series ( $R_1 = R_2 = R$ )  
 $2R(1 + \alpha_{eq} \Delta T) = R(1 + \alpha_1 \Delta T) + R(1 + \alpha_2 \Delta T)$   
 $\alpha_{eq} = \frac{\alpha_1 + \alpha_2}{2}$

In parallel  $\frac{1}{R_{eq}} = \frac{1}{R_1} + \frac{1}{R_2}$   
 $= \frac{dR}{R^2} = \frac{-dR_1}{R_1^2} + \frac{-dR_2}{R_2^2}$   
 $\frac{\alpha R dT}{R^2} = \frac{\alpha_1 R_1 dT}{R_1^2} + \frac{\alpha_2 R_2 dT}{R_2^2}$   
 $\frac{\alpha}{R} = \frac{\alpha_1}{R_1} + \frac{\alpha_2}{R_2} \Rightarrow \alpha = \frac{\alpha_1 + \alpha_2}{2}$

29. A circular coil of diameter 0.02 m is kept in an uniform magnetic field which is perpendicular to the plane of the coil. Initial magnetic field is 5000 T after 2 second magnetic field becomes 3000 T. If average value of induced emf in coil is 22 volt, find no. of turns in the coil.  $\left(\pi = \frac{22}{7}\right)$ .

Ans. (1) 70 (2) 50 (3) 30 (4) 100

Sol.  $\varepsilon = \frac{\Delta\phi}{\Delta t} = \frac{NB_f A - NB_i A}{\Delta t} = \frac{N(B_f - B_i) A}{\Delta t}$   
 $\Rightarrow 22 = N = \frac{2000 \times \pi \times 0.01 \times 0.01}{2} \Rightarrow N = 70$

30. In hydrogen like atom, wavelength of first line of lyman series is  $\lambda$ . then wavelength of second line of lyman series shall be ?

(1)  $\frac{5}{27} \lambda$  (2)  $\frac{5}{32} \lambda$  (3)  $\frac{27}{32} \lambda$  (4)  $\frac{15}{23} \lambda$

Sol.  $\frac{1}{\lambda} = RZ^2 \left[ \frac{1}{1} - \frac{1}{4} \right]; n = 2 \rightarrow 1$

$\frac{1}{\lambda'} = RZ^2 \left[ \frac{1}{1} - \frac{1}{9} \right]; n = 3 \rightarrow 1$

$\frac{\lambda'}{\lambda} = \frac{3}{8}$

$\lambda' = \frac{27}{32} \lambda$

## Resonance Eduventures Ltd.

Reg. Office & Corp. Office : CG Tower, A-46 & 52, IPIA, Near City Mall, Jhalawar Road, Kota (Raj.) - 324005

Ph. No.: +91-744-2777777, 2777700 | FAX No. : +91-022-39167222

To Know more : sms RESO at 56677 | Website : www.resonance.ac.in | E-mail : contact@resonance.ac.in | CIN : U80302RJ2007PLC024029

Toll Free : 1800 258 5555 | WhatsApp : 7340010333 | Facebook : ResonanceEdu | Twitter : ResonanceEdu | YouTube : ResonanceEdu | Blog : resonance.ac.in

This solution was download from Resonance JEE(Main) 2024 Solution portal

PAGE # 12



Boost your Percentile with

# PERCENTILE BOOSTER COURSE

COURSE COMMENCEMENT: 5<sup>th</sup> FEBRUARY 2024

TARGET

**JEE (Main) 2024**

April Attempt

MODE:  
OFFLINE/  
ONLINE

COURSE

## Concept

Percentile Booster Course (PBC) is for those students who want to boost their percentile in JEE-Main 2024 through a systematic complete course revision & practice plan.

In this course, daily chapter wise tests, Full Syllabus Test, JEE Preparatory Test will be conducted and each test will be followed by proper offline/online discussion class.

COURSE FEE

Offline: ₹4999 | Online: ₹2499

## COURSE FEATURES

- Complete Course Coverage
- Regular Practice through Daily Online Practice Test
- Full Syllabus Test
- Approx 2500 practice Qus.
- Chapter wise Test
- Joint Preparatory Test
- Back up support of recorded lectures
- Regular Test discussion classes for concept clearance

**JEE (Main) 2024 April Attempt में**

अधिकतम %ile प्राप्त करने के लिए आज ही Join करें!

SCAN TO  
APPLY



\*T & C Apply

# ADMISSIONS OPEN FOR CLASS 12+

ACADEMIC SESSION 2024-25

**TARGET: JEE (ADV.) 2024**

For Class XII Passed Student

**VISHESH COURSE**

MODE: OFFLINE/ONLINE

CLASS STARTS  
**08<sup>TH</sup> APRIL, 2024**

**TARGET: JEE (MAIN) 2024**

For Class XII Passed Student

**ABHYAAS COURSE**

MODE: OFFLINE/ONLINE

CLASS STARTS  
**08<sup>TH</sup> APRIL, 2024**

**SCHOLARSHIP ON THE BASIS OF JEE (MAIN) 2024 %ILE/AIR**



### « JEE (Advanced) 2023 RESULT »

**AIR 7**



**BIKKINA A. CHOWDARY**

All India Ranks (AIR-CRL) in  
Top 50 : 8 Top 100 : 15  
All Students are from Our  
Offline/Online Classroom Programs

**AIR 22**



DESHANK P. SINGH

**AIR 26**



MAYANK SONI

**AIR 29**



TANISHQ M. MANCHANI

**AIR 32**



KRITIN GUPTA

**AIR 33**



NAMAN GOYAL

**AIR 37**



S S SUNEEDH

**AIR 44**



KAUSHAL VIJAYVERGIYA

### « JEE (Main) 2023 RESULT »

**22 वर्षों से लगातार... श्रेष्ठ शिक्षण, श्रेष्ठ परिणाम...**

**6 AIRs in TOP-50**

**AIR 5**

300/300 Marks



KAUSHAL VIJAYVERGIYA

**AIR 26**

100%ile



SOHAM DAS

**AIR 29**

100%ile



ASHIK STEHNY

**AIR 31**

100%ile



KRISH GUPTA

**AIR 34**

100%ile



MAYANK SONI

**AIR 50**

100%ile (Maths)



HARSHAL LASOO

**ADMISSIONS OPEN**

Academic Session 2024-25

**Class: V to XII & XII+**



**SCHOLARSHIP UPTO**

**100%**

Based on ResoNET (Scholarship Test)

REGISTERED & CORPORATE OFFICE (CIN: U80302RJ2007PLC024029)

CG Tower, A-46 & 52, IPIA, Near City Mall, Jhalawar Road, Kota (Rajasthan) - 324005

☎ 0744-2777777 | 📞 73400 10345 | ✉ contact@resonance.ac.in | 🌐 www.resonance.ac.in | Follow Us: 📺 @ResonanceEdu 📷 @Resonance\_Edu

